

Multi Tasking (Non-Technical) Staff Examination 2019

| | |
|------------------|------------------------------|
| Roll No. | |
| Registration No. | |
| Name | |
| Test Venue | ION Digital Zone iDZ 2 Patia |
| Test Time | 4:00 PM - 5:30 PM |
| Test Date | 06/08/2019 |

Section : General English

Q.1 Select the most appropriate option to substitute the underlined segment in the given sentence. If there is no need to substitute it, select No Improvement.

Luckily we have got the few minutes to spare.

- Ans
- 1. No Improvement
 - 2. a little
 - 3. quite few
 - 4. a few

Question ID : 239087980
Status : Answered
Chosen Option : 4

Q.2 Select the most appropriate meaning of the given idiom.

To pick up the threads

- Ans
- 1. To examine an issue seriously
 - 2. Being received very warmly
 - 3. To restart from the previous closing point
 - 4. At a short distance

Question ID : 239087996
Status : Answered
Chosen Option : 1

Q.3 Find the part of the given sentence that has an error in it. If there is no error, choose 'No error'.

He has deposits all his money in banks. /No error

- Ans
- 1. No error
 - 2. up all his
 - 3. He has deposits
 - 4. money in banks

Question ID : 239087978
Status : Answered
Chosen Option : 3

Q.4 Select the most appropriate synonym of the given word.

Profuse

- Ans
- 1. Thrifty
 - 2. Sparse
 - 3. Aplenty
 - 4. Scarce

Question ID : 239087991
Status : Not Answered
Chosen Option : --

Q.5 Find the part of the given sentence that has an error in it. If there is no error, choose 'No error'.

Her relatives were presented at the station to see her off. /No error

- Ans
- 1. to see her off
 - 2. Her relatives were
 - 3. presented at the station
 - 4. No error

Question ID : 239087977
Status : Answered
Chosen Option : 3

Q.6 Choose the correctly spelt word.

- Ans
- 1. Noticeable
 - 2. Noticable
 - 3. Nauticable
 - 4. Noteceable

Question ID : 239087999
Status : Answered
Chosen Option : 1

Q.7 Select the most appropriate option to fill in the blank.

Your answer book will be _____ by a computer.

- Ans
- 1. evaluated
 - 2. submitted
 - 3. replied
 - 4. tested

Question ID : 2390871002
Status : Answered
Chosen Option : 1

Q.8 Select the most appropriate option to substitute the underlined segment in the given sentence. If there is no need to substitute it, select No Improvement.

Friends stand by each other on time of need.

- Ans
- 1. for time
 - 2. in times
 - 3. No Improvement
 - 4. of times

Question ID : 239087981
Status : Answered
Chosen Option : 2

Q.9 Select the most appropriate option to fill in the blank.

He is addicted to alcohol and exerts a bad influence _____ his family.

- Ans
- 1. for
 - 2. on

- 3. about
- 4. in

Question ID : 239087983
 Status : Answered
 Chosen Option : 2

Q.10 Choose the most appropriate word that can substitute the given group of words.

Killing of pests


- Ans
- 1. Herbicide
 - 2. Suicide
 - 3. Pesticide
 - 4. Patricide

Question ID : 239087998
 Status : Answered
 Chosen Option : 3

Q.11 Choose the most appropriate word that can substitute the given group of words.

A group of ships

- Ans
- 1. Fleet
 - 2. Bevy
 - 3. Suite
 - 4. Army



Question ID : 239087997
 Status : Answered
 Chosen Option : 1

Q.12 Select the most appropriate antonym of the given word.

Relaxed

- Ans
- 1. Calm
 - 2. Arrogant
 - 3. Peaceful
 - 4. Tense



Question ID : 239087993
 Status : Answered
 Chosen Option : 4

Q.13 Select the most appropriate option to substitute the underlined segment in the given sentence. If there is no need to substitute it, select No Improvement.

In his coming film the Spider-Man will be seen in European cities.

- Ans
- 1. was seen
 - 2. No Improvement
 - 3. has seen
 - 4. had been seen

Question ID : 239087982
 Status : Answered
 Chosen Option : 2

Q.14 Select the most appropriate meaning of the given idiom.

sail in the same boat

- Ans
- 1. pay a very low price for something
 - 2. be in the same situation as others
 - 3. be in heavy debt
 - 4. go for a boat ride

Question ID : 239087995
 Status : Answered
 Chosen Option : 2

Q.15 Choose the correctly spelt word.

- Ans
- 1. Pasenger
 - 2. Passinger
 - 3. Passengger
 - 4. Passenger

Question ID : 2390871000
 Status : Answered
 Chosen Option : 4

Q.16 Find the part of the given sentence that has an error in it. If there is no error, choose 'No error'.

He went up to her and asks her why she had insulted him. /No error

- Ans
- 1. He went up to her
 - 2. No error
 - 3. she had insulted him
 - 4. and asks her why



Question ID : 239087979
 Status : Answered
 Chosen Option : 4

Q.17 Select the most appropriate option to fill in the blank.

Raja _____ the house before Hari got there.

- Ans
- 1. left
 - 2. had left
 - 3. will leave
 - 4. leaves

Question ID : 239087984
 Status : Answered
 Chosen Option : 2

Q.18 Select the most appropriate synonym of the given word.

Rectify

- Ans
- 1. Raid
 - 2. Bend
 - 3. Folly
 - 4. Amend

Question ID : 239087992
 Status : Answered
 Chosen Option : 4

Q.19 Select the most appropriate option to fill in the blank.

The teacher was very _____ in his subject.

- Ans
- 1. top
 - 2. master
 - 3. proficient
 - 4. best

Question ID : 2390871001
 Status : Answered
 Chosen Option : 3

Q.20 Select the most appropriate antonym of the given word.

Steep

- Ans
- 1. Flat
 - 2. Shallow
 - 3. Rough
 - 4. Narrow

Question ID : 239087994
 Status : Answered
 Chosen Option : 3

Comprehension:

In the following passage some words have been deleted. Fill in the blanks with the help of the alternatives given. Select the most appropriate option for each blank.

The Thane Municipal Transport (TMT) has seen a 6% drop (1) _____ passenger density after the Brihanmumbai Electric Supply and Transport (BEST) reduced (2) _____ bus fares recently. The drop, though small is enough to set the (3) _____ bells ringing. TMT plies nearly 300 buses and is already facing (4) _____ in managing regular schedules. The ticket cost cut by BEST (5) _____ TMT routes that overlap that of the BEST.

SubQuestion No : 21

Q.21 Select the most appropriate option for blank No. 1.

- Ans
- 1. in
 - 2. of
 - 3. on
 - 4. from

Question ID : 239087986
 Status : Answered
 Chosen Option : 1

Comprehension:

In the following passage some words have been deleted. Fill in the blanks with the help of the alternatives given. Select the most appropriate option for each blank.

The Thane Municipal Transport (TMT) has seen a 6% drop (1) _____ passenger density after the Brihanmumbai Electric Supply and Transport (BEST) reduced (2) _____ bus fares recently. The drop, though small is enough to set the (3) _____ bells ringing. TMT plies nearly 300 buses and is already facing (4) _____ in managing regular schedules. The ticket cost cut by BEST (5) _____ TMT routes that overlap that of the BEST.

SubQuestion No : 22

Q.22 Select the most appropriate option for blank No. 2.

- Ans
- 1. his
 - 2. its
 - 3. it's
 - 4. her

Question ID : 239087987
Status : Answered
Chosen Option : 2

Comprehension:

In the following passage some words have been deleted. Fill in the blanks with the help of the alternatives given. Select the most appropriate option for each blank.

The Thane Municipal Transport (TMT) has seen a 6% drop (1)____ passenger density after the Brihanmumbai Electric Supply and Transport (BEST) reduced (2)____ bus fares recently. The drop, though small is enough to set the (3)____ bells ringing. TMT plies nearly 300 buses and is already facing (4)____ in managing regular schedules. The ticket cost cut by BEST (5)____ TMT routes that overlap that of the BEST.

SubQuestion No : 23

Q.23 Select the most appropriate option for blank No. 3.

- Ans 1. clock-tower
- 2. alarm
- 3. church
- 4. temple

Question ID : 239087988
Status : Answered
Chosen Option : 2

Comprehension:

In the following passage some words have been deleted. Fill in the blanks with the help of the alternatives given. Select the most appropriate option for each blank.

The Thane Municipal Transport (TMT) has seen a 6% drop (1)____ passenger density after the Brihanmumbai Electric Supply and Transport (BEST) reduced (2)____ bus fares recently. The drop, though small is enough to set the (3)____ bells ringing. TMT plies nearly 300 buses and is already facing (4)____ in managing regular schedules. The ticket cost cut by BEST (5)____ TMT routes that overlap that of the BEST.

SubQuestion No : 24

Q.24 Select the most appropriate option for blank No. 4.

- Ans 1. difficulties
- 2. consequences
- 3. facilities
- 4. differences

Question ID : 239087989
Status : Answered
Chosen Option : 1

Comprehension:

In the following passage some words have been deleted. Fill in the blanks with the help of the alternatives given. Select the most appropriate option for each blank.

The Thane Municipal Transport (TMT) has seen a 6% drop (1)____ passenger density after the Brihanmumbai Electric Supply and Transport (BEST) reduced (2)____ bus fares recently. The drop, though small is enough to set the (3)____ bells ringing. TMT plies nearly 300 buses and is already facing (4)____ in managing regular schedules. The ticket cost cut by BEST (5)____ TMT routes that overlap that of the BEST.

SubQuestion No : 25

Q.25 Select the most appropriate option for blank No. 5.

- Ans 1. has impacting
- 2. impacting
- 3. impact
- 4. has impacted

Question ID : 239087990

Status : Answered
Chosen Option : 4

Section : General Intelligence & Reasoning

Q.1 By interchanging which two signs the equation will be correct?

$6 + 9 \times 2 - 3 \div 4 = 8$

- Ans
- 1. - and +
 - 2. - and ×
 - 3. + and +
 - 4. + and ×

Question ID : 239087742
Status : Answered
Chosen Option : 1

Q.2 Select the option that is related to the third number in the same way as the second number is related to the first number.

$16 : 9 :: 36 : ?$

- Ans
- 1. 17
 - 2. 19
 - 3. 23
 - 4. 11

Question ID : 239087739
Status : Answered
Chosen Option : 2

Q.3 In the following question below are given some statements followed by some conclusions based on those statements. Taking the given statements to be true even if they seem to be at variance from commonly known facts. Read all the conclusions and then decide which of the given conclusion logically follows the given statements.

Statements:
I. No T is L.
II. All L are K.

Conclusions:
I. Some K are L.
II. Some K are T.
III. No K is L.

- Ans
- 1. Both conclusion II and III follows
 - 2. Neither conclusion follow
 - 3. Only conclusion II follows
 - 4. Only conclusion I follows

Question ID : 239087736
Status : Answered
Chosen Option : 4

Q.4 Five boys J, K, L, M and T are standing in a queue one after the other (not necessarily in the same order). There is only one boy between K and J. There is only one boy between K and L. There are four boys behind J. T is three places ahead of L. How many boys are ahead of M?

- Ans
- 1. 3
 - 2. 0
 - 3. 2
 - 4. 1

Question ID : 239087734
 Status : Answered
 Chosen Option : 1

Q.5 By interchanging which two numbers, the value obtained after solving the given equation will be '13'?

$$7 + 8 \div 4 \times 3$$

- Ans 1. 8 and 3
 2. 8 and 4
 3. 7 and 3
 4. 3 and 4

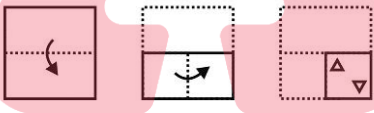
Question ID : 239087741
 Status : Answered
 Chosen Option : 1

Q.6 Six cameras G, H, P, S, K and I are placed in a row facing towards north (Not necessarily in the same order). S is placed second to the left of I. H is placed second to the right of G. K is placed third to the left of G. Which of the following statement is correct about camera I?

- Ans 1. I is not the immediate neighbour of H
 2. I is between G and S
 3. P is third to left of I
 4. I is to the immediate left of G

SSC Question ID : 239087732
 Status : Answered
 Chosen Option : 3

Q.7 A piece of paper is folded and punched as shown below in the question figures. From the given answer figures, indicate how it will appear when opened?



- Ans 1.
- 2.
- 3.
- 4.



Question ID : 239087747
 Status : Answered
 Chosen Option : 4

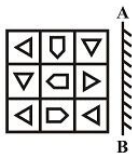
Q.8 In the following question, select the number which can be placed at the sign of question mark (?) from the given alternatives.

- 5 1 3
- 9 9 4
- 6 ? 7
- 29 22 18

- Ans
- 1. 5
 - 2. 3
 - 3. 6
 - 4. 4

Question ID : 239087740
 Status : Answered
 Chosen Option : 2

Q.9 If a mirror is placed on the line AB, then which of the answer figures is the right image of the given figure?



Ans

- 1.
- 2.
- 3.
- 4.

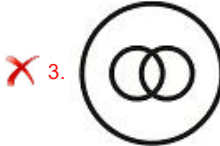


Question ID : 239087746
 Status : Answered
 Chosen Option : 2

Q.10 Identify the diagram that best represents the relationship among the given classes.

Pentagon, Hexagon, Figure

Ans



Question ID : 239087748
 Status : Answered
 Chosen Option : 1

Q.11 In the following question below are given some statements followed by some conclusions based on those statements. Taking the given statements to be true even if they seem to be at variance from commonly known facts. Read all the conclusions and then decide which of the given conclusion logically follows the given statements.

Statements:

- I. Some numbers are letters.
- II. No letter is water.

Conclusions:

- I. Some water are numbers.
- II. Some letters are number.
- III. All letters are water.

- Ans
- ✗ 1. Both conclusion I and III follows
 - ✗ 2. Only conclusion I follows
 - ✓ 3. Only conclusion II follows
 - ✗ 4. Neither conclusion follow



Question ID : 239087735
 Status : Answered
 Chosen Option : 3

Q.12 In a certain code language, 'JAN' is written as '25', 'WED' is written as '32'. What is the code for 'SEP' in that code language?

- Ans
- ✗ 1. 38
 - ✗ 2. 39
 - ✓ 3. 40
 - ✗ 4. 41

Question ID : 239087730
 Status : Answered
 Chosen Option : 3

Q.13 A series is given with one term missing. Select the correct alternative from the given ones that will complete the series.

LP, MR, ? , OV, PX

- Ans
- ✗ 1. MT
 - ✗ 2. NU

- 3. MU
- 4. NT

Question ID : 239087724
 Status : Answered
 Chosen Option : 4

Q.14 Study the given pattern carefully and select the figure that will complete the pattern given in the question figure.



Ans

- 1.
- 2.
- 3.
- 4.

SSC
 Question ID : 239087744
 Status : Answered
 Chosen Option : 4

Q.15 In a certain code language, 'DRAUGH' is written as 'LKYEVB'. What is the code for 'MAHTOS' in that code language?

- 1. WSXLFQ
- 2. XTYMER
- 3. WSXLEQ
- 4. XTYMFR

adda247
 Question ID : 239087728
 Status : Answered
 Chosen Option : 3

Q.16 Select the option that is related to the third term in the same way as the second term is related to the first term.

Rainbow : Sky :: Tsunami : ?

- 1. Pond
- 2. Sea
- 3. Land
- 4. Atmosphere

Question ID : 239087726
 Status : Answered
 Chosen Option : 2

Q.17 Select the number that can replace the question mark (?) in the following series.

12, 12, 24, 72, 288, ?

- 1. 1228

- ✓ 2. 1440
- ✗ 3. 1680
- ✗ 4. 1448

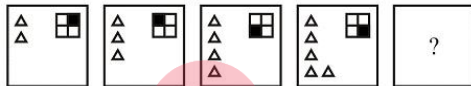
Question ID : 239087738
 Status : Answered
 Chosen Option : 2

Q.18 In a certain code language, 'MOTHER' is written as 'TOMREH'. What is the code for 'STORME' in that code language?

- Ans
- ✗ 1. OUSEMR
 - ✗ 2. EMROTS
 - ✗ 3. MROTES
 - ✓ 4. OTSEMR

Question ID : 239087729
 Status : Answered
 Chosen Option : 4

Q.19 In the following question, select the figure which can be placed at the sign of question mark (?) from the given alternatives.



Ans

- ✗ 1.
- ✗ 2.
- ✓ 3.
- ✗ 4.



Question ID : 239087743
 Status : Answered
 Chosen Option : 3

Q.20 In a certain code language, 'ROCKS' is written as '82649', 'MENTR' is written as '01578'. What is the code for 'TROMN' in that code language?

- Ans
- ✓ 1. 78205
 - ✗ 2. 78203
 - ✗ 3. 76205
 - ✗ 4. 70581

Question ID : 239087731
 Status : Answered

Chosen Option : 1

Q.21 From the given answer figures, select the one in which the question figure is hidden/embedded. (Rotation not allowed)



Ans


1.



2.



3.



4.



SSC

Question ID : 239087745
Status : Answered
Chosen Option : 3

Q.22 Select the number that can replace the question mark (?) in the following series.

16, 49, 149, 450, 1354, ?

Ans 1. 4067

2. 4062

3. 4066

4. 4068

Question ID : 239087737
Status : Answered
Chosen Option : 1

Q.23 In the following question, select the related letters from the given alternatives.

JRM : DLG :: TNL : ?

Ans 1. NHF

2. NHE

3. MHF

4. MHE

Question ID : 239087727
Status : Answered
Chosen Option : 1

Q.24 उस विकल्प का चयन करें जो तीसरे शब्द से उसी तरह से संबंधित है जैसे दूसरा शब्द पहले शब्द से

संबंधित है।

पकड़ना : चिमटा :: खोदना : ?

- Ans
- 1. कलम
 - 2. गटर
 - 3. चम्मच
 - 4. कुदाल

Question ID : 239087725
Status : Answered
Chosen Option : 4

Q.25 Six players C, E, G, I, K and M are standing in a row facing towards north (Not necessarily in the same order). Two players are standing between C and M. I is standing to the immediate left of C. E is standing second to the left of G. K is third to the right of G.

Who is standing second to the right of I?

- Ans
- 1. E
 - 2. M
 - 3. K
 - 4. C

Question ID : 239087733
Status : Answered
Chosen Option : 3

Section : Numerical Aptitude

SSC

adda247

Q.1 If $X : Y = 13 : 12$ and $X - Y = 2$, then what is value of $2X + 3Y$?

- Ans
- 1. 144
 - 2. 120
 - 3. 124
 - 4. 136

Question ID : 239087860
Status : Answered
Chosen Option : 3

Q.2 The radii of a right circular cone and a right circular cylinder are in the ratio 2 : 3. If the ratio of the heights of the cone and the cylinder is 3 : 4, then what is the ratio of the volumes of the cone and the cylinder?

- Ans
- 1. 1 : 6
 - 2. 1 : 3
 - 3. 1 : 9
 - 4. 2 : 3

Question ID : 239087868
Status : Answered
Chosen Option : 2

Q.3 Average age of 9 men is 45 years. If age of one woman is included, then the average age becomes 44 years. What is the age of the woman?

- Ans
- 1. 44 years
 - 2. 30 years
 - 3. 40 years
 - 4. 35 years

Question ID : 239087853
 Status : Answered
 Chosen Option : 4

Q.4 P sold an article to Q at a profit of 20%. Q sold the same article to R at a loss of 25%. R sold the same article to T at a profit of 50%. If P bought the article at ₹100, then at what price did T buy that article?

- Ans
- 1. ₹145
 - 2. ₹125
 - 3. ₹115
 - 4. ₹135

Question ID : 239087858
 Status : Answered
 Chosen Option : 4

Q.5 What is the value of $(6 \text{ of } 4 \div 16 \times 48) \div 8 \times 4 + 2 \times 3 \div 6 + 5(6 - 2)$?

- Ans
- 1. 63
 - 2. 79
 - 3. 67
 - 4. 57

Question ID : 239087851
 Status : Answered
 Chosen Option : 4

Q.6 ₹480 is invested at simple interest. It becomes ₹520 after 20 months. What is the interest rate per annum?

- Ans
- 1. 6%
 - 2. 5%
 - 3. 8%
 - 4. 4%

Question ID : 239087862
 Status : Answered
 Chosen Option : 2

Q.7 The monthly incomes of A and B are ₹12000 and ₹15000 respectively. The monthly expenditure of A is ₹8000. If the ratio of the monthly expenditures of A and B is 2 : 3, then what is the sum of their monthly savings?

- Ans
- 1. ₹7000
 - 2. ₹8000
 - 3. ₹5000
 - 4. ₹6000

Question ID : 239087861
 Status : Answered
 Chosen Option : 1

Q.8 The area of a rhombus is 300 cm^2 . If the length of one of the diagonals of the rhombus is 30 cm, then what is the length (in cm) of the second diagonal?

- Ans
- 1. 25
 - 2. 10
 - 3. 20
 - 4. 30

Question ID : 239087870

Status : **Answered**
Chosen Option : 2

Q.9 If the height of an equilateral triangle is $20\sqrt{2}$ cm, then what is its area (in cm^2)?

- Ans
- 1. $\frac{800}{3}$
 - 2. $\frac{1}{3} 400\sqrt{3}$
 - 3. $\frac{1}{3} 800\sqrt{3}$
 - 4. $\frac{400}{3}$

Question ID : **239087869**
Status : **Answered**
Chosen Option : 2

Q.10 A number is first increased by 40% and then it is increased by 30%. What is the net percentage increase?

- Ans
- 1. 82%
 - 2. 96%
 - 3. 72%
 - 4. 70%

Question ID : **239087856**
Status : **Answered**
Chosen Option : 1

Q.11 Ravika alone can complete three-fifth of a work in 105 days. Mallika can complete one-third of work in 50 days. In how many days Ravika and Mallika working together, can complete $\frac{26}{35}$ of the work?

- Ans
- 1. 63 days
 - 2. 70 days
 - 3. 60 days
 - 4. 80 days

Question ID : **239087865**
Status : **Answered**
Chosen Option : 3

Q.12 The speed of a car is 36 km/h. How much time (in minutes) will a bus traveling at one-fifth of the speed of the car take to cover a distance of 900 m?

- Ans
- 1. $5\frac{1}{2}$
 - 2. $7\frac{1}{2}$
 - 3. $10\frac{1}{2}$
 - 4. $8\frac{1}{2}$

Question ID : **239087866**
Status : **Answered**
Chosen Option : 2

Q.13 What is the least number of four digits which is exactly divisible by 2, 4, 6 and 8?

- Ans 1. 1016
 2. 1024
 3. 1008
 4. 1096

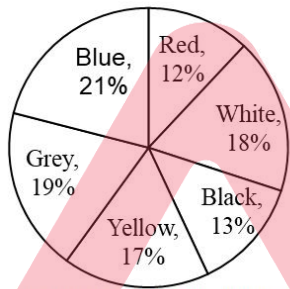
Question ID : 239087849
 Status : Answered
 Chosen Option : 3

Q.14 Average of 50 numbers was calculated as 20 when three numbers, 26, 36 and 64 were wrongly read as 31, 46 and 59 respectively. What is the correct average?

- Ans 1. 26.2
 2. 19.8
 3. 20.2
 4. 24.4

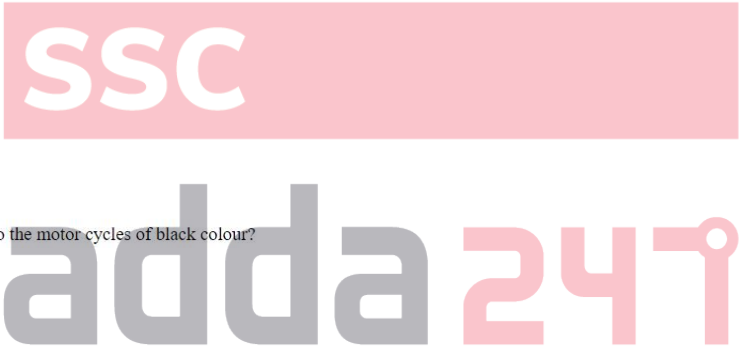
Question ID : 239087852
 Status : Answered
 Chosen Option : 2

Q.15 The Pie chart given below presents the percentages of the number of motor cycles of different colours out of the total number of motor cycles, parked in an area. The central angles shown in the Pie chart are not as per any chosen scale.



What is the central angle (nearest to one degree) corresponding to the motor cycles of black colour?

- Ans 1. 44
 2. 45
 3. 46
 4. 47



Question ID : 239087873
 Status : Answered
 Chosen Option : 4

Q.16 The data below shows the number of batsmen having different batting averages.

| Average | Number of batsmen |
|---------|-------------------|
| 40 – 44 | 12 |
| 44 – 48 | 10 |
| 48 – 52 | 8 |
| 52 – 56 | 6 |
| 56 – 60 | 4 |

What is the mean batting average per batsman?

- Ans 1. 48
 2. 47
 3. 46
 4. 45

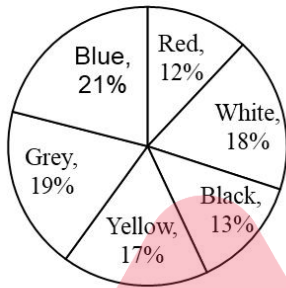
Question ID : 239087855
Status : Answered
Chosen Option : 1

Q.17 Mohit is five times efficient as Rohit. If Mohit can complete a piece of work in 28 days less than Rohit, then in how many days can Rohit alone complete the same work?

- Ans
- 1. 35 days
 - 2. 32 days
 - 3. 45 days
 - 4. 40 days

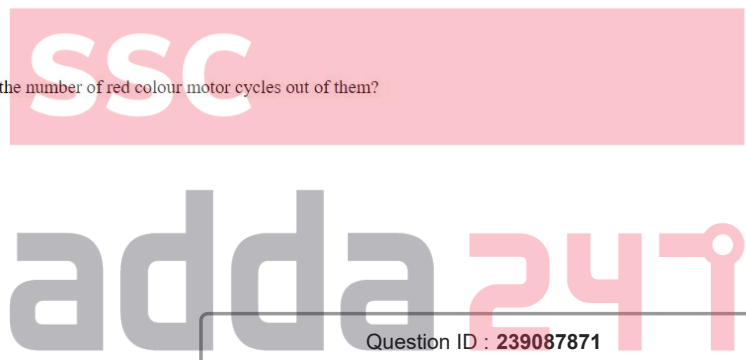
Question ID : 239087864
Status : Answered
Chosen Option : 1

Q.18 The Pie chart given below presents the percentages of the number of motor cycles of different colours out of the total number of motor cycles, parked in an area. The central angles shown in the Pie chart are not as per any chosen scale.



If the total number of motor cycles parked is 2300, then what is the number of red colour motor cycles out of them?

- Ans
- 1. 284
 - 2. 288
 - 3. 280
 - 4. 276



Question ID : 239087871
Status : Answered
Chosen Option : 4

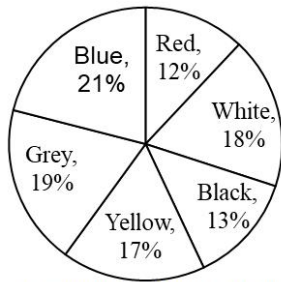
Q.19 A sum of ₹2400 becomes ₹3600 in 6 years at a certain rate of compound interest (compounded annually). What will be the amount after 12 years at the same rate of interest?

- Ans
- 1. ₹6000
 - 2. ₹4800
 - 3. ₹5400
 - 4. ₹4500

Question ID : 239087863
Status : Answered
Chosen Option : 3

Q.20

The Pie chart given below presents the percentages of the number of motor cycles of different colours out of the total number of motor cycles, parked in an area. The central angles shown in the Pie chart are not as per any chosen scale.



If the total number of motor cycles parked is 2300, the number having white colour is how much less than those having the blue colour?

- Ans
- 1. 66
 - 2. 72
 - 3. 63
 - 4. 69

Question ID : 239087872
Status : Answered
Chosen Option : 4

Q.21 A train, 700 m long crosses a pole in 35 seconds. How much time does it take to cross a platform of length 740 m?

- Ans
- 1. 1 min 24 sec
 - 2. 1 min 30 sec
 - 3. 1 min 12 sec
 - 4. 1 min 20 sec

Question ID : 239087867
Status : Answered
Chosen Option : 3

Q.22 If the selling price of an article is 25% of its cost price, then what will be the loss percentage?

- Ans
- 1. 25%
 - 2. 60%
 - 3. 75%
 - 4. 50%

Question ID : 239087857
Status : Answered
Chosen Option : 3

Q.23 A trader marked up his articles 25% more than the cost price. If he offered a discount of 10%, then what will be his profit percentage?

- Ans
- 1. 10%
 - 2. 12.5%
 - 3. 25%
 - 4. 37.5%

Question ID : 239087854
Status : Answered
Chosen Option : 2

Q.24 The ratio of the ages of two persons is 3 : 4. If the age of one of them is greater than the other by 8 years, then what is the sum of their ages?

- Ans
- 1. 54 years

- 2. 58 years
- 3. 60 years
- 4. 56 years

Question ID : 239087859
 Status : Answered
 Chosen Option : 4

Q.25 What is the value of $\frac{3}{4} \div \left(\frac{1}{2} + \frac{1}{16}\right) + \frac{2}{3}$ of $\frac{4}{9} \div \left(\frac{1}{3} - \frac{11}{81}\right) + \frac{1}{4} \times \frac{2}{3}$?

- Ans
- 1. 3
 - 2. 1
 - 3. 2
 - 4. 4

Question ID : 239087850
 Status : Answered
 Chosen Option : 1

Section : General awareness

Q.1 'Dhansiri' is the tributary of which of the following river?

- Ans
- 1. Ganga
 - 2. Narmada
 - 3. Brahmaputra
 - 4. Indus



Question ID : 239087618
 Status : Not Answered
 Chosen Option : --

Q.2 'Kajri' folk song is related to which of the following state?

- Ans
- 1. Maharashtra
 - 2. Uttar Pradesh
 - 3. Himachal Pradesh
 - 4. Rajasthan

Question ID : 239087600
 Status : Answered
 Chosen Option : 4

Q.3 'Rani ki vav' motif is present on which of the following currency notes?

- Ans
- 1. 50 Rupee Note
 - 2. 200 Rupee Note
 - 3. 10 Rupee Note
 - 4. 100 Rupee Note

Question ID : 239087609
 Status : Answered
 Chosen Option : 4

Q.4 Who has been appointed as the Managing Director and Chief Financial Officer of World Bank in July 2019?

- Ans
- 1. P.S.Jaykumar
 - 2. Anshula Kant
 - 3. Ravneet Gill
 - 4. Amitabh Chaudhry

Question ID : 239087604
Status : Answered
Chosen Option : 2

Q.5 Which of the following Articles is related to Jammu & Kashmir state of India?

- Ans
- 1. Article 378
 - 2. Article 374
 - 3. Article 370
 - 4. Article 366

Question ID : 239087612
Status : Answered
Chosen Option : 3

Q.6 According to the Census 2011, what is the literacy rate of India?

- Ans
- 1. 0.7404
 - 2. 0.9401
 - 3. 0.644
 - 4. 0.8402

SSC

Question ID : 239087607
Status : Not Answered
Chosen Option : --

Q.7 Which of the following ions are responsible for hardness of water?

- Ans
- 1. Sodium and Magnesium ions
 - 2. Calcium and Magnesium ions
 - 3. Potassium and Calcium ions
 - 4. Sodium and Calcium ions

adda247

Question ID : 239087615
Status : Answered
Chosen Option : 4

Q.8 When was the first amendment made to the Indian Constitution?

- Ans
- 1. 1954
 - 2. 1951
 - 3. 1953
 - 4. 1952

Question ID : 239087611
Status : Answered
Chosen Option : 4

Q.9 In which of the following state of India the only floating park in the world is situated?

- Ans
- 1. Meghalaya
 - 2. Manipur
 - 3. Tripura

4. Assam

Question ID : 239087620
Status : Not Answered
Chosen Option : --

Q.10 When did the Non-Cooperation Movement end?

- Ans 1. 1930
 2. 1925
 3. 1922
 4. 1920

Question ID : 239087622
Status : Answered
Chosen Option : 1

Q.11 Which of the following is the traditional theatre of Jammu and Kashmir?

- Ans 1. Jatra
 2. Swaang
 3. Maach
 4. Bhand Pather

Question ID : 239087599
Status : Not Answered
Chosen Option : --

Q.12 The concept of 'The Four Noble Truths' belongs to which of the following religions?

- Ans 1. Jainism
 2. Sikhism
 3. Hinduism
 4. Buddhism

Question ID : 239087623
Status : Answered
Chosen Option : 4

Q.13 Who among the following received Rajiv Gandhi Khel Ratna Award 2018 in weightlifting?

- Ans 1. Mirabai Chanu
 2. Karnam Malleswari
 3. Swati Singh
 4. Sanjita Chanu

Question ID : 239087603
Status : Answered
Chosen Option : 1

Q.14 Who among the following has the power to promulgate ordinance?

- Ans 1. Prime Minister
 2. President
 3. Chief Justice of Supreme Court
 4. Defence Minister

Question ID : 239087610

Status : **Answered**
Chosen Option : 2

Q.15 Who is the inventor of Dynamite?

- Ans
- 1. Alfred Nobel
 - 2. Marie Currie
 - 3. Robert Oppenheimer
 - 4. Otto Hahn

Question ID : **239087613**
Status : **Answered**
Chosen Option : 1

Q.16 'Equus caballus' is the scientific name of which of the following animals?

- Ans
- 1. Cheeta
 - 2. Horse
 - 3. Wild Ass
 - 4. Zebra

Question ID : **239087614**
Status : **Answered**
Chosen Option : 4

Q.17 As of June 2019, who is the CEO of Central Bank of India?

- Ans
- 1. P. V. Bharti
 - 2. Shyam Srinivasan
 - 3. Pallav Mohapatra
 - 4. T. N. Manoharan

SSC

adda247

Question ID : **239087608**
Status : **Not Answered**
Chosen Option : --

Q.18 Which of the following award is given to a University for its all-round good performance in sports?

- Ans
- 1. Maulana Abul Kalam Azad Trophy
 - 2. Dhyanchand Award
 - 3. Arjuna Award
 - 4. Dronacharya Award

Question ID : **239087606**
Status : **Answered**
Chosen Option : 1

Q.19 Which of the following Vitamin is related to Osteoporosis?

- Ans
- 1. Vitamin B
 - 2. Vitamin A
 - 3. Vitamin C
 - 4. Vitamin D

Question ID : **239087616**
Status : **Answered**
Chosen Option : 3

Q.20 Who was the Mughal emperor during the 1857 revolt in India?

- Ans
- 1. Shah Alam II
 - 2. Alamgir II
 - 3. Bahadur Shah II
 - 4. Akbar Shah II

Question ID : 239087621
Status : Not Answered
Chosen Option : --

Q.21 In which union territory of India, Bastille Day is celebrated?

- Ans
- 1. Lakshadweep
 - 2. Daman & Diu
 - 3. Dadra and Nagar Haveli
 - 4. Puducherry

Question ID : 239087601
Status : Answered
Chosen Option : 1

Q.22 Which of the following is a Communicable disease?

- Ans
- 1. Measles
 - 2. Asthma
 - 3. Diabetes
 - 4. Alzheimer

SSC

Question ID : 239087617
Status : Answered
Chosen Option : 1

Q.23 Who is the writer of the book 'Thoughts on Pakistan'?

- Ans
- 1. Muhammad Ali Jinnah
 - 2. Dr. B.R. Ambedkar
 - 3. Mahatma Gandhi
 - 4. Rajendra Prasad

adda247

Question ID : 239087605
Status : Answered
Chosen Option : 1

Q.24 Dipa Karmakar is associated with which of the following sports?

- Ans
- 1. Golf
 - 2. Gymnastics
 - 3. Tennis
 - 4. Badminton

Question ID : 239087602
Status : Answered
Chosen Option : 2

Q.25 Which of the following state of India is main producer of Chromite?

- Ans
- 1. Goa
 - 2. Odisha

- 3. Haryana
- 4. Rajasthan

Question ID : **239087619**
Status : **Answered**
Chosen Option : **2**

