



GOVT. OF NCT OF DELHI
Delhi Subordinate Services Selection Board
FC-18, Institutional Area, Karkardooma, Delhi - 110092.
www.dsssb.delhigovt.nic.in

Participant ID	[REDACTED]
Participant Name	[REDACTED]
Test Center Name	iON Digital Zone iDZ 2 Sector 62
Test Date	26/06/2025
Test Time	5:00 PM - 7:00 PM
Subject	TGT Special Education Teacher

Section : General Awareness

Q.1 In the example where the reserve ratio is 20%, what is the value of the money multiplier?

- Ans
- 1. 4
 - 2. 10
 - 3. 2
 - 4. 5

Question ID : 441009297254
Option 1 ID : 4410091156093
Option 2 ID : 4410091156095
Option 3 ID : 4410091156092
Option 4 ID : 4410091156094

Q.2 On what basis are seats allocated to different states in the Rajya Sabha?

- Ans
- 1. Population of the state
 - 2. Economic performance
 - 3. Literacy rate
 - 4. Area of the state

Question ID : 441009297116
Option 1 ID : 4410091155542
Option 2 ID : 4410091155541
Option 3 ID : 4410091155543
Option 4 ID : 4410091155540

Q.3 Which of the following schemes launched in February 2024 achieved a historic milestone with 10 lakh homes being solar powered as of 10 March 2025?

- Ans
- 1. Pradhan Mantri Awas Yojana
 - 2. Pradhan Mantri Kisan Urja Suraksha evam Utthaan Mahabhiyaan
 - 3. Pradhan Mantri Surya Ghar Muft Bijli Yojana
 - 4. Pradhan Mantri Krishi Sinchayee Yojana

Question ID : 441009293355
Option 1 ID : 4410091140299
Option 2 ID : 4410091140296
Option 3 ID : 4410091140297
Option 4 ID : 4410091140298

**Test
Prime**

By Adda247

ALL EXAMS, ONE SUBSCRIPTION



Test. Analyze. Improve. Repeat.



Don't just *prepare*. Perform.

Test Prime — built only for mock tests.



1,50,000+
Mock Tests



25,000+
Previous Year Papers



800+
Exam Covered



500% Refund
on Selection



5 lakh+
Free Quizzes



Daily
Free PDFs



Job Alerts
Stay Updated

- Multilingual
- Detailed Solution
- Strong and Weak Areas



**All India
Rankings**

Compete with lakhs.
Rank. Improve. Repeat.



← Adda247 test prime

Rating ▾

Editors' choice

New



Adda247 Test Prime
Adda Education • Education
Installed



DOWNLOAD THE APP



Q.4 Who was named 'Para-sportswoman of the year 2024' at the BBC Indian Sportswoman of the Year awards held in Delhi, in February 2025?

- Ans
- 1. Manu Bhaker
 - 2. Smriti Mandana
 - 3. Sheetal Devi
 - 4. Avani Lekhara

Question ID : 441009291595
Option 1 ID : 4410091133217
Option 2 ID : 4410091133214
Option 3 ID : 4410091133215
Option 4 ID : 4410091133216

Q.5 Which of the following agricultural practices is the most influenced by terrain and altitude?

- Ans
- 1. Tea plantations are suited for areas with level fields and standing water.
 - 2. Apple orchards flourish below 1500 metres in elevation.
 - 3. Paddy cultivation thrives in rolling terrains where water drains away.
 - 4. Coconut orchards are typically found at low altitudes near the sea level.

Question ID : 441009303268
Option 1 ID : 4410091179630
Option 2 ID : 4410091179631
Option 3 ID : 4410091179628
Option 4 ID : 4410091179629

Q.6 Which Governor-General abolished the Sati system in 1829 by passing Regulation XVII?

- Ans
- 1. Lord Curzon
 - 2. Lord Canning
 - 3. Lord Dalhousie
 - 4. Lord William Bentinck

Question ID : 441009300719
Option 1 ID : 4410091169981
Option 2 ID : 4410091169982
Option 3 ID : 4410091169980
Option 4 ID : 4410091169983

Q.7 Which of the following languages is NOT a part of the Dravidian language family?

- Ans
- 1. Kannada
 - 2. Assamese
 - 3. Telugu
 - 4. Malayalam

Question ID : 441009301011
Option 1 ID : 4410091171156
Option 2 ID : 4410091171159
Option 3 ID : 4410091171158
Option 4 ID : 4410091171157

Q.8 Where did Gandhi conduct his first great experiment in Satyagraha in 1917?

- Ans
- 1. Nagpur
 - 2. Ahmedabad
 - 3. Delhi
 - 4. Champaran

Question ID : 441009300525
Option 1 ID : 4410091169198
Option 2 ID : 4410091169196
Option 3 ID : 4410091169199
Option 4 ID : 4410091169197

Q.9 According to the Annual Report of the Periodic Labour Force Survey (January to December 2024) released in April 2025, the unemployment rate in rural areas has declined to what percentage?

- Ans
- 1. 0.05%
 - 2. 29.75%
 - 3. 35%
 - 4. 4.2%

Question ID : 441009293262
Option 1 ID : 4410091139924
Option 2 ID : 4410091139925
Option 3 ID : 4410091139927
Option 4 ID : 4410091139926

Q.10 Which of the following states was formerly a Union Territory before attaining statehood?

- Ans
- 1. Meghalaya
 - 2. Sikkim
 - 3. Manipur
 - 4. Nagaland

Question ID : 441009297171
Option 1 ID : 4410091155763
Option 2 ID : 4410091155760
Option 3 ID : 4410091155762
Option 4 ID : 4410091155761

Q.11 What does EBLR stand for in the context of banking in India?

- Ans
- 1. External Benchmark Lending Rate
 - 2. Estimated Base Lending Ratio
 - 3. Estimated Benchmark Lending Ratio
 - 4. Effective Borrowing and Lending Rate

Question ID : 441009297291
Option 1 ID : 4410091156229
Option 2 ID : 4410091156227
Option 3 ID : 4410091156230
Option 4 ID : 4410091156228

Q.12 In March 2025, who launched the 'Cities Coalition for Circularity', a multi-nation alliance for city-to-city collaboration, knowledge-sharing and private sector partnerships for sustainable urban development?

- Ans 1. India
 2. France
 3. Japan
 4. Canada

Question ID : 441009293368
Option 1 ID : 4410091140349
Option 2 ID : 4410091140350
Option 3 ID : 4410091140351
Option 4 ID : 4410091140348

Q.13 Between 1885 and 1905, Indian industrialists, drawing upon emerging nationalist sentiments, demanded which of the following to protect Indian industries?

- Ans 1. Industry nationalisation, import bans and restrictions on foreign capital
 2. Export subsidies, low tariffs and continued trade preference for Britain
 3. Rupee devaluation, high import duties and end of British trade preference
 4. Free trade policies, gold standard currency and British trade dominance

Question ID : 441009300622
Option 1 ID : 4410091169595
Option 2 ID : 4410091169592
Option 3 ID : 4410091169594
Option 4 ID : 4410091169593

Q.14 Which of the following states have small population shares despite their large geographical areas?

- Ans 1. Uttar Pradesh, Maharashtra, Bihar
 2. Jammu & Kashmir, Arunachal Pradesh, Uttarakhand
 3. Punjab, Haryana, Gujarat
 4. West Bengal, Tamil Nadu, Rajasthan

Question ID : 441009303309
Option 1 ID : 4410091179796
Option 2 ID : 4410091179797
Option 3 ID : 4410091179799
Option 4 ID : 4410091179798

Q.15 Which edition of the Khelo India Winter Games was held in two phases at Leh in January 2025 and Gulmarg in March 2025?

- Ans 1. 8
 2. 5
 3. 10
 4. 16

Question ID : 441009291646
Option 1 ID : 4410091133427
Option 2 ID : 4410091133429
Option 3 ID : 4410091133426
Option 4 ID : 4410091133428

Q.16 What major economic policy shift did Manmohan Singh introduce in his 1991 Budget to address the crisis?

- Ans
- 1. Increase in government subsidies and expenditure
 - 2. Liberalisation and opening up of the Indian economy
 - 3. Nationalisation of major industries
 - 4. Tightening of license controls and import restrictions

Question ID : 441009297313
Option 1 ID : 4410091156318
Option 2 ID : 4410091156317
Option 3 ID : 4410091156315
Option 4 ID : 4410091156316

Q.17 What role do the Himalayas play in influencing the climate of India?

- Ans
- 1. They cause a reduction in monsoon rainfall in southern India.
 - 2. They increase the effect of the summer monsoon in the country.
 - 3. They prevent cold winds from entering northern India.
 - 4. They allow tropical winds to influence India's climate.

Question ID : 441009303254
Option 1 ID : 4410091179573
Option 2 ID : 4410091179575
Option 3 ID : 4410091179572
Option 4 ID : 4410091179574

Q.18 In April 2025, the Ministry of Women and Child Development made an announcement that all Anganwadi Centres across India have been registered on which of the following?

- Ans
- 1. Ayushman Arogya Mandir
 - 2. GHAR portal
 - 3. Track Child portal
 - 4. Poshan Tracker application

Question ID : 441009293273
Option 1 ID : 4410091139969
Option 2 ID : 4410091139970
Option 3 ID : 4410091139971
Option 4 ID : 4410091139968

Q.19 Members of the Rajya Sabha are elected by the:

- Ans
- 1. General public
 - 2. Members of the Lok Sabha
 - 3. Members of State Legislative Council
 - 4. Elected members of State Legislative Assemblies

Question ID : 441009297098
Option 1 ID : 4410091155468
Option 2 ID : 4410091155471
Option 3 ID : 4410091155469
Option 4 ID : 4410091155470

Q.20 What are the different forms of the same gene, which can result in variations such as eye colour or disease risk, called?

- Ans 1. Genomes
 2. Chromosomes
 3. Nucleotides
 4. Alleles

Question ID : 441009297422
Option 1 ID : 4410091156765
Option 2 ID : 4410091156763
Option 3 ID : 4410091156766
Option 4 ID : 4410091156764

Section : General intelligence and Reasoning Ability

Q.1 Karan ranked 25th from the top and 58th from the bottom in his class. How many students are there in his class?

- Ans 1. 81
 2. 82
 3. 84
 4. 83

Question ID : 441009267631
Option 1 ID : 4410091039763
Option 2 ID : 4410091039762
Option 3 ID : 4410091039765
Option 4 ID : 4410091039764

Q.2 Refer to the following number series and answer the question that follows. Counting to be done from left to right only. (All numbers are single-digit numbers only.)

(Left) 8 5 6 4 1 2 4 5 7 5 9 6 3 2 1 5 8 4 5 6 7 5 (Right)

How many such even digits are there which are immediately preceded by an odd digit and also immediately followed by an even digit?

- Ans 1. Two
 2. Three
 3. Four
 4. One

Question ID : 441009360289
Option 1 ID : 4410091407167
Option 2 ID : 4410091407168
Option 3 ID : 4410091407169
Option 4 ID : 4410091407166

Q.3 What should come in place of the question mark (?) in the given series?

$$\frac{2}{3}, \frac{1}{3}, \frac{1}{6}, \frac{1}{12}, \frac{1}{24}, ?$$

Ans

1. $\frac{1}{64}$

2. $\frac{1}{124}$

3. $\frac{1}{48}$

4. $\frac{1}{96}$

Question ID : 441009360285
 Option 1 ID : 4410091407153
 Option 2 ID : 4410091407152
 Option 3 ID : 4410091407150
 Option 4 ID : 4410091407151

Q.4 Susheela, Ujwal, Yamini, Reena, Pawan, Pari, Kirti, and Neeta are sitting around a circular table, facing the centre. Ujwal sits third to the right of Kirti, Pawan sits second to the left of Neeta, who sits second to the left of Kirti. Yamini is an immediate neighbour of Kirti and Pari. Reena does not sit with Pawan. Who sits third to the left of Pawan?

Ans

1. Reena

2. Kirti

3. Pari

4. Yamini

Question ID : 441009360309
 Option 1 ID : 4410091407249
 Option 2 ID : 4410091407248
 Option 3 ID : 4410091407246
 Option 4 ID : 4410091407247

Q.5 P starts from Point C and drives 2 km towards west. He then takes a left turn, drives 5 km, turns left and drives 7 km. He then takes a left turn and drives 7 km. He takes a final left turn, drives 5 km and stops at Point P. How far (shortest distance) and towards which direction should he drive in order to reach Point C again? (All the turns are 90-degree turns only unless specified.)

Ans

1. 2 km towards east

2. 2 km towards north

3. 2 km towards west

4. 2 km towards south

Question ID : 441009360316
 Option 1 ID : 4410091407275
 Option 2 ID : 4410091407277
 Option 3 ID : 4410091407276
 Option 4 ID : 4410091407274

Q.6 Read the given statements and conclusions carefully. Assuming that the information given in the statements is true, even if it appears to be at variance with commonly known facts, decide which of the given conclusion(s) logically follow(s) from the statements.

Statements:

All sweaters are jackets.
All sweaters are trousers.
Some trousers are cargoes.

Conclusions:

(I) Some cargoes are sweaters.
(II) Some trousers are jackets.

- Ans 1. Only conclusion (I) follows.
 2. Neither conclusion (I) nor (II) follows.
 3. Both conclusions (I) and (II) follow.
 4. Only conclusion (II) follows.

Question ID : 441009360302
Option 1 ID : 4410091407218
Option 2 ID : 4410091407220
Option 3 ID : 4410091407221
Option 4 ID : 4410091407219

Q.7 In the following series, only one letter-cluster is incorrect. Select the INCORRECT letter-cluster.

PRK NPI LNG JLE HJC FHB

- Ans 1. LNG
 2. FHB
 3. JLE
 4. HJC

Question ID : 441009360304
Option 1 ID : 4410091407227
Option 2 ID : 4410091407226
Option 3 ID : 4410091407228
Option 4 ID : 4410091407229

Q.8 If 'A' stands for '+', 'B' stands for '×', 'C' stands for '÷' and 'D' stands for '−', what will be come in place of the question mark '?' in the following equation?

3 B 24 A 36 D 39 C 31 = ?

- Ans 1. -8
 2. -4
 3. -7
 4. -6

Question ID : 441009360275
Option 1 ID : 4410091407113
Option 2 ID : 4410091407111
Option 3 ID : 4410091407112
Option 4 ID : 4410091407110

Q.9 SAWE is related to AIEM in a certain way based on the English alphabetical order. In the same way, YGCK is related to GOKS. To which of the given options is WEAI related, following the same logic?

- Ans
- 1. EMQW
 - 2. WMNH
 - 3. EWIO
 - 4. EMIQ

Question ID : 441009360292
 Option 1 ID : 4410091407179
 Option 2 ID : 4410091407180
 Option 3 ID : 4410091407181
 Option 4 ID : 4410091407178

Q.10 In a certain code language,
 'A ÷ B' means 'A is the sister of B',
 'A # B' means 'A is the brother of B',
 'A + B' means 'A is the wife of B' and
 'A % B' means 'A is the father of B'.

How is A related to K if 'A % B # G ÷ H + K'?

- Ans
- 1. Wife's father
 - 2. Father
 - 3. Brother
 - 4. Wife's Brother

Question ID : 441009360313
 Option 1 ID : 4410091407262
 Option 2 ID : 4410091407263
 Option 3 ID : 4410091407265
 Option 4 ID : 4410091407264

Q.11 Seven boxes G, H, I, J, M, N and O are kept one over the other but not necessarily in the same order.

H is kept second from the bottom. Only three boxes are kept between I and J. O is kept immediately below J. N is kept on one of the positions above I. M is kept immediately above G.

Which box is second from the top?

- Ans
- 1. J
 - 2. M
 - 3. G
 - 4. N

Question ID : 441009360294
 Option 1 ID : 4410091407186
 Option 2 ID : 4410091407187
 Option 3 ID : 4410091407188
 Option 4 ID : 4410091407189

Q.12 Select the set in which the numbers are related in the same way as are the numbers of the following sets.

(Note: Operations should be performed on the whole numbers, without breaking down the numbers into their constituent digits. E.g., 13 – Operations on 13 such as adding/subtracting/multiplying to 13 can be performed. Breaking down 13 into 1 and 3 and then performing mathematical operations on 1 and 3 is not allowed.)

(35, 116, 3)
(49, 164, 5)

- Ans 1. (39, 182, 21)
 2. (23, 99, 11)
 3. (32, 168, 25)
 4. (11, 42, 4)

Question ID : 441009360278
 Option 1 ID : 4410091407122
 Option 2 ID : 4410091407125
 Option 3 ID : 4410091407124
 Option 4 ID : 4410091407123

Q.13 Select the pair that follows the same pattern as that followed by the two pairs given below. Both pairs follow the same pattern.

NHF : MDB
 QKF : PGB

- Ans 1. INS : HKP
 2. TED : SAA
 3. ORL : NOH
 4. JSK : IOG

Question ID : 441009360318
 Option 1 ID : 4410091407285
 Option 2 ID : 4410091407284
 Option 3 ID : 4410091407283
 Option 4 ID : 4410091407282

Q.14 In a certain code language, 'land road car' is coded as 'op cx xs', 'plane car bus' is coded as 'xd gh op', and 'truck bus jet' is coded as 'gh bq sw'. (All the codes are two-letter codes only.). How is 'car' coded in the given code language?

- Ans 1. cx
 2. op
 3. xd
 4. gh

Question ID : 441009360324
 Option 1 ID : 4410091407309
 Option 2 ID : 4410091407306
 Option 3 ID : 4410091407307
 Option 4 ID : 4410091407308

Q.15 Based on the English alphabetical order, three of the following four letter-cluster pairs are alike in a certain way and thus form a group. Which letter-cluster pair DOES NOT belong to that group?
(Note: The odd one out is not based on the number of consonants/vowels or their position in the letter-cluster.)

- Ans 1. LN - HJ
 2. SU - OQ
 3. OP - KM
 4. JL - FH

Question ID : 441009360300
 Option 1 ID : 4410091407211
 Option 2 ID : 4410091407213
 Option 3 ID : 4410091407212
 Option 4 ID : 4410091407210

Q.16 If 'A' stands for '+', 'B' stands for '×', 'C' stands for '+' and 'D' stands for '-', then the resultant of which of the following would be 33?

- Ans 1. 9 B 4 D 72 A 9 C 5
 2. 9 C 4 A 72 D 9 B 5
 3. 9 A 4 C 72 B 9 D 5
 4. 9 D 4 A 72 C 9 B 5

Question ID : 441009360282
 Option 1 ID : 4410091407140
 Option 2 ID : 4410091407138
 Option 3 ID : 4410091407141
 Option 4 ID : 4410091407139

Q.17 Manju, Anita, Arjun, Kanak, Sadhna, Parul, Ravi, and Prince are sitting around a circular table, facing the centre.
 Anita sits second to the right of Arjun. Manju sits third to the left of Ravi, who is an immediate neighbour of Arjun. Kanak sits third to the left of Parul, who does not sit with Ravi. Sadhna is an immediate neighbour of Manju and Anita.
 Who sits third to the right of Parul?

- Ans 1. Prince
 2. Manju
 3. Ravi
 4. Kanak

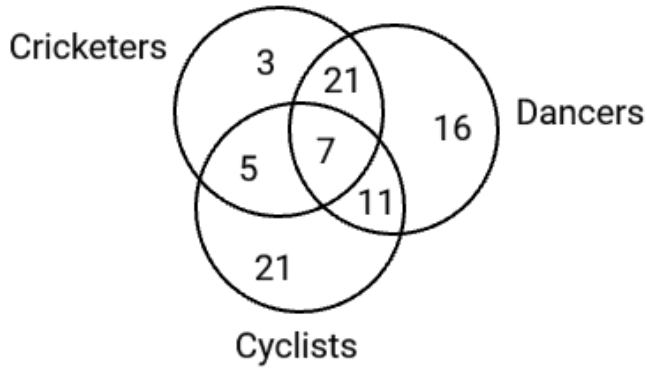
Question ID : 441009360310
 Option 1 ID : 4410091407252
 Option 2 ID : 4410091407253
 Option 3 ID : 4410091407250
 Option 4 ID : 4410091407251

Q.18 The position(s) of how many letters will remain unchanged if each of the letters in the word FACTION is arranged in the English alphabetical order?

- Ans 1. Two
 2. One
 3. Three
 4. None

Question ID : 441009360296
 Option 1 ID : 4410091407196
 Option 2 ID : 4410091407195
 Option 3 ID : 4410091407197
 Option 4 ID : 4410091407194

Q.19 Study the given figure and answer the question that follows. The numbers in different sections in the figure indicate the number of persons.
 (NOTE: You have to take the given data to be true even if they seem to be at variance from commonly known facts)



How many cricketers are dancers as well as cyclists?

- Ans 1. 7
 2. 13
 3. 21
 4. 11

Question ID : 441009267982
 Option 1 ID : 4410091041156
 Option 2 ID : 4410091041158
 Option 3 ID : 4410091041159
 Option 4 ID : 4410091041157

Q.20 2 is related to 9 following a certain logic. Following the same logic, 7 is related to 64. To which of the given options is 11 related, following the same logic?

(Note: Operations should be performed on the whole numbers, without breaking down the numbers into their constituent digits. E.g., 13 – Operations on 13 such as adding/subtracting/multiplying to 13 can be performed. Breaking down 13 into 1 and 3 and then performing mathematical operations on 1 and 3 is not allowed.)

- Ans 1. 121
 2. 144
 3. 100
 4. 169

Question ID : 441009360279
 Option 1 ID : 4410091407127
 Option 2 ID : 4410091407128
 Option 3 ID : 4410091407126
 Option 4 ID : 4410091407129

Section : Arithmetical and Numerical Ability

Q.1 Find the value of $53^{-2} \div 53^{12} \times 53^{-5}$.

- Ans 1. 53^{-26}
 2. 53^{-28}
 3. 53^{-18}
 4. 53^{-19}

Question ID : 441009366084
 Option 1 ID : 4410091430497
 Option 2 ID : 4410091430496
 Option 3 ID : 4410091430495
 Option 4 ID : 4410091430494

Q.2 If the ratio of two numbers is 2 : 9 and their HCF is 22, then their LCM is:

- Ans
- 1. 414
 - 2. 426
 - 3. 404
 - 4. 396

Question ID : 441009366086
Option 1 ID : 4410091430505
Option 2 ID : 4410091430503
Option 3 ID : 4410091430504
Option 4 ID : 4410091430502

Q.3 ₹6,083 is divided among A, B, C and D in such a way that the shares of A and B, B and C and C and D are in the ratios of 2 : 3, 4 : 5 and 10 : 3, respectively. The share of A (in ₹) is:

- Ans
- 1. 1,142
 - 2. 1,232
 - 3. 1,302
 - 4. 1,352

Question ID : 441009366071
Option 1 ID : 4410091430443
Option 2 ID : 4410091430442
Option 3 ID : 4410091430444
Option 4 ID : 4410091430445

Q.4 Amit purchased 10 kg of rice at the rate of ₹38 per kg and 31 kg of rice at ₹44 per kg. He sold the whole mixture at the rate of ₹42 per kg. Find his loss (in ₹).

- Ans
- 1. ₹27
 - 2. ₹30
 - 3. ₹17
 - 4. ₹22

Question ID : 441009364723
Option 1 ID : 4410091425143
Option 2 ID : 4410091425145
Option 3 ID : 4410091425144
Option 4 ID : 4410091425142

Q.5 2 men or 8 women can do a job in 3 days. 2 men work for 1 days and leave. The number of women required to complete the remaining work in 8 days is:

- Ans
- 1. 2
 - 2. 3
 - 3. 5
 - 4. 1

Question ID : 441009366073
Option 1 ID : 4410091430450
Option 2 ID : 4410091430452
Option 3 ID : 4410091430451
Option 4 ID : 4410091430453

Q.6 A customer purchases a product for ₹550 after a 12% discount. What was the marked price?

- Ans
- 1. ₹695
 - 2. ₹625
 - 3. ₹685
 - 4. ₹675

Question ID : 441009284197
Option 1 ID : 4410091103880
Option 2 ID : 4410091103878
Option 3 ID : 4410091103879
Option 4 ID : 4410091103877

Q.7 If the mean proportion of 24 and A is 72, then what is the value of A?

- Ans
- 1. 216
 - 2. 214
 - 3. 218
 - 4. 217

Question ID : 441009366068
Option 1 ID : 4410091430430
Option 2 ID : 4410091430433
Option 3 ID : 4410091430432
Option 4 ID : 4410091430431

Q.8 Gopal purchased 10 kg of rice at the rate of ₹38 per kg and 31 kg of rice at ₹46 per kg. He sold the whole mixture at the rate of ₹42 per kg. Find his loss (in ₹).

- Ans
- 1. 79
 - 2. 92
 - 3. 84
 - 4. 89

Question ID : 441009366049
Option 1 ID : 4410091430356
Option 2 ID : 4410091430357
Option 3 ID : 4410091430354
Option 4 ID : 4410091430355

Q.9 How much will a sum of ₹53,000 become after one year if the interest is compounded half-yearly at 20% per annum compound interest?

- Ans
- 1. ₹64,152
 - 2. ₹64,410
 - 3. ₹63,416
 - 4. ₹64,130

Question ID : 441009366051
Option 1 ID : 4410091430365
Option 2 ID : 4410091430363
Option 3 ID : 4410091430364
Option 4 ID : 4410091430362

Q.10 A batsman in his 14th inning makes a score of 91 runs, thereby increasing his average by 1 run. Find his average runs after the 14th inning.

Ans 1. 78

2. 77

3. 81

4. 91

Question ID : 441009366060

Option 1 ID : 4410091430398

Option 2 ID : 4410091430401

Option 3 ID : 4410091430399

Option 4 ID : 4410091430400

Q.11 While going to a shopping mall, Anjali travels at a speed of 42 km/hr and on her way back, she travels at a speed of 56 km/hr. What is her average speed (in km/hr) for the whole journey?

Ans 1. 47

2. 48

3. 49

4. 50

Question ID : 441009366064

Option 1 ID : 4410091430416

Option 2 ID : 4410091430414

Option 3 ID : 4410091430415

Option 4 ID : 4410091430417

Q.12 By how much is 60% of 70 greater than $\frac{1}{5}$ of 55?

Ans 1. 31

2. 28

3. 25

4. 29

Question ID : 441009366091

Option 1 ID : 4410091430522

Option 2 ID : 4410091430523

Option 3 ID : 4410091430524

Option 4 ID : 4410091430525

Q.13 By how much is 60% of 80 greater than $\frac{2}{5}$ of 55?

Ans 1. 26

2. 24

3. 20

4. 23

Question ID : 441009366090

Option 1 ID : 4410091430518

Option 2 ID : 4410091430521

Option 3 ID : 4410091430520

Option 4 ID : 4410091430519

Q.14 A pipe can fill a tank in 18 hours. Another pipe can empty the filled tank in 24 hours. If both the pipes are opened simultaneously, then the time (in hours) in which the tank will be filled is:

- Ans 1. 72
 2. 75
 3. 74
 4. 73

Question ID : 441009366092
 Option 1 ID : 4410091430526
 Option 2 ID : 4410091430529
 Option 3 ID : 4410091430528
 Option 4 ID : 4410091430527

Q.15 Simplify

$$\frac{\left(\frac{17}{2} + \frac{18}{7} \text{ of } \frac{7}{2}\right)}{\left(14 - \frac{15}{7} \div \frac{2}{7}\right)}$$

- Ans 1. $\frac{35}{13}$
 2. $\frac{28}{22}$
 3. $\frac{45}{23}$
 4. $\frac{43}{20}$

Question ID : 441009366087
 Option 1 ID : 4410091430506
 Option 2 ID : 4410091430507
 Option 3 ID : 4410091430508
 Option 4 ID : 4410091430509

Q.16 The average of 7 numbers is 49. If each number is decreased by 4, what will the new average be?

- Ans 1. 41
 2. 49
 3. 7
 4. 45

Question ID : 441009366096
 Option 1 ID : 4410091430544
 Option 2 ID : 4410091430543
 Option 3 ID : 4410091430545
 Option 4 ID : 4410091430542

Q.17 While going shopping to a mall, Priya travels at a speed of 28 km/hr and on her way back, she travels at a speed of 84 km/hr. What is her average speed for the whole journey (in km/hr)?

- Ans
- 1. 34
 - 2. 32
 - 3. 33
 - 4. 42

Question ID : 441009364738
 Option 1 ID : 4410091425205
 Option 2 ID : 4410091425204
 Option 3 ID : 4410091425203
 Option 4 ID : 4410091425202

Q.18 How much is the curved surface area (in square units) of a cone with a height double its base radius, which is made to hold a volume of V cubic units?

- Ans
- 1. $\pi\sqrt{5}\left\{\frac{3V}{2\pi}\right\}^{\frac{2}{3}}$
 - 2. $\pi\sqrt{5}\left\{\frac{3V}{2\pi}\right\}^{\frac{1}{3}}$
 - 3. $\sqrt{5}\left\{\frac{3V}{2\pi}\right\}^{\frac{2}{3}}$
 - 4. $\sqrt{5}\left\{\frac{3V}{2\pi}\right\}^{\frac{1}{3}}$

Question ID : 441009366100
 Option 1 ID : 4410091430559
 Option 2 ID : 4410091430558
 Option 3 ID : 4410091430560
 Option 4 ID : 4410091430561

Q.19 On a certain sum, simple interest for 2 years at 20% per annum is ₹1,142. Find the sum (in ₹).

- Ans
- 1. 2,855
 - 2. 2,856
 - 3. 2,858
 - 4. 2,857

Question ID : 441009366054
 Option 1 ID : 4410091430374
 Option 2 ID : 4410091430377
 Option 3 ID : 4410091430376
 Option 4 ID : 4410091430375

Q.20 A spherical tank has a diameter of 18 m. Calculate its volume. (Use $\pi = 3.14$)

- Ans
- 1. 3553.08 m³
 - 2. 3354.08 m³
 - 3. 3052.08 m³
 - 4. 3152.09 m³

Question ID : 441009285709
 Option 1 ID : 4410091109932
 Option 2 ID : 4410091109933
 Option 3 ID : 4410091109931
 Option 4 ID : 4410091109930

Section : Test of Hindi Language and Comprehension

Q.1 निम्न मुहावरे के अर्थ को बताएं -
'कंघी चोटी करना'

- Ans
- 1. पूर्ण रूप से सहयोग देना
 - 2. कंचन बरसना
 - 3. शृंगार करना
 - 4. भारी भीड़ होना

Question ID : 441009374866
 Option 1 ID : 4410091465042
 Option 2 ID : 4410091465040
 Option 3 ID : 4410091465039
 Option 4 ID : 4410091465041

Q.2 निम्न वाक्य के रिक्त स्थान में 'घटती' का विलोम शब्द लिखें -
वर्तमान में जनसंख्या बहुत तेजी से जा रही है।'

- Ans
- 1. उत्तम
 - 2. श्रेष्ठ
 - 3. बहुत
 - 4. बढ़ती

Question ID : 441009374860
 Option 1 ID : 4410091465015
 Option 2 ID : 4410091465018
 Option 3 ID : 4410091465017
 Option 4 ID : 4410091465016

Q.3 निम्नलिखित वाक्यों में उनके प्रथम तथा अन्तिम अंश संख्या 1 और 6 के अन्तर्गत दिए गए हैं। बीच वाले चार अंश (य), (र), (ल), (व) बिना क्रम के हैं। चारों अंशों को उचित क्रमानुसार व्यवस्थित कर सही विकल्प चुनिए।

- (1) दूरदर्शन पर प्रदर्शित दो धारावाहिक
(य) लोग इनकी पहले से प्रतीक्षा करते रहते हैं
(र) पहले 'रामायण' और अब 'महाभारत'
(ल) और इन्हें देखने के लिए
(व) इतने लोकप्रिय रहे हैं कि
(6) अपने सारे काम-काज छोड़ देते हैं।

- Ans 1. र व य ल
 2. ल य र व
 3. र य व ल
 4. र ल य व

Question ID : 441009374826
Option 1 ID : 4410091464891
Option 2 ID : 4410091464892
Option 3 ID : 4410091464894
Option 4 ID : 4410091464893

Q.4 दिए गये वाक्यांश के लिए निम्नलिखित विकल्पों में से सार्थक शब्द का चयन करें-
पहाड़ के ऊपर की समतल जमीन

- Ans 1. अनादृत
 2. अधिकृत
 3. उपत्यका
 4. अधित्यका

Question ID : 441009374834
Option 1 ID : 4410091464926
Option 2 ID : 4410091464923
Option 3 ID : 4410091464924
Option 4 ID : 4410091464925

Q.5 उचित शब्द का प्रयोग कर वाक्य को पूर्ण करें-
तुम्हें मेरी प्रतीक्षा चाहिए थी।

- Ans 1. कहनी
 2. बोलनी
 3. देखनी
 4. करनी

Question ID : 441009374818
Option 1 ID : 4410091464862
Option 2 ID : 4410091464861
Option 3 ID : 4410091464860
Option 4 ID : 4410091464859

Q.6 किसान के घर अनाज -----' वाक्य के रिक्त स्थान के लिए उपयुक्त क्रियाविशेषण किस विकल्प में है-

- Ans 1. रोज़ सूखता है
 2. भरा है
 3. बिकता है
 4. नहीं है

Question ID : 441009374814
Option 1 ID : 4410091464845
Option 2 ID : 4410091464843
Option 3 ID : 4410091464844
Option 4 ID : 4410091464846

Q.7 रामलाल ने मुझे देखकर कहा, अब तो ईश्वर का ही भरोसा है।

उपरोक्त दिए गए रेखांकित शब्द का पर्यायवाची होगा –

- Ans
- 1. प्रश्रय
 - 2. आशीष
 - 3. विश्वास
 - 4. आशय

Question ID : 441009374856
Option 1 ID : 4410091465001
Option 2 ID : 4410091464999
Option 3 ID : 4410091465002
Option 4 ID : 4410091465000

Q.8 दिए गये अशुद्ध वाक्य के लिए निम्नलिखित विकल्पों में से शुद्ध वाक्य का चयन करें-
अच्छे परुष दूसरों के संताप से संतप्त रहते हैं।

- Ans
- 1. अच्छे परुष दूसरों को संताप से संतप्त रहते हैं।
 - 2. अच्छे पुरुष दूसरों के संताप से संतप्त रहते हैं।
 - 3. अच्छे परुष दूसरों के संताप से संतप्त रहता हैं।
 - 4. अच्छे परुष दूसरों के संताप से सतप्त रहते हैं।

Question ID : 441009374869
Option 1 ID : 4410091465053
Option 2 ID : 4410091465052
Option 3 ID : 4410091465054
Option 4 ID : 4410091465051

Q.9 'वह _____ सम्पन्न छात्र है' वाक्य में रिक्त स्थान की पूर्ति के लिए सही विकल्प चुनें

- Ans
- 1. कुशलता
 - 2. प्रतिभा
 - 3. अध्ययन
 - 4. धन

Question ID : 441009374809
Option 1 ID : 4410091464824
Option 2 ID : 4410091464825
Option 3 ID : 4410091464823
Option 4 ID : 4410091464826

Q.10 दिए गये वाक्यांश के लिए निम्नलिखित विकल्पों में से सार्थक शब्द का चयन करें-
घर के सामने का मंच

- Ans
- 1. चौक
 - 2. अलिंद
 - 3. मानिंद
 - 4. आगामी

Question ID : 441009374833
Option 1 ID : 4410091464922
Option 2 ID : 4410091464920
Option 3 ID : 4410091464919
Option 4 ID : 4410091464921

Q.11 वाक्य का सर्वाधिक उपयुक्त क्रम पहचानें-

1. जो व्यक्ति
2. मेरे कपड़े सिलता है,
3. वह तीन महीने के लिए
4. गाँव गया है।

Ans 1. 1,2,3,4

2. 2,1,4,3

3. 1,4,3,2

4. 3,4,1,2

Question ID : 441009374828

Option 1 ID : 4410091464901

Option 2 ID : 4410091464900

Option 3 ID : 4410091464899

Option 4 ID : 4410091464902

Q.12 'लाख का घर राख होना' मुहावरे का क्या अर्थ है?

Ans 1. धनी का निर्धन हो जाना

2. चालाकी से मतलब निकालना

3. अशोभनीय कार्य करना

4. प्राणों की बाजी लगा देना

Question ID : 441009374857

Option 1 ID : 4410091465004

Option 2 ID : 4410091465003

Option 3 ID : 4410091465005

Option 4 ID : 4410091465006

Q.13 निम्न वाक्य का रेखांकित शब्द अशुद्ध है, शुद्ध शब्द बताएं -
'मालिक मजदूरों का शोषण करते हैं।'

Ans 1. सोसन

2. शोसन

3. शोषण

4. सोशण

Question ID : 441009374861

Option 1 ID : 4410091465021

Option 2 ID : 4410091465022

Option 3 ID : 4410091465019

Option 4 ID : 4410091465020

Q.14 निम्नांकित विकल्पों में से उचित कारक चिन्ह का चयन करके वाक्य पूर्ण करें-
छात्रों को पत्र..... द्वारा परीक्षा की सूचना मिली।

Ans 1. के

2. ने

3. की

4. से

Question ID : 441009374821

Option 1 ID : 4410091464873

Option 2 ID : 4410091464874

Option 3 ID : 4410091464872

Option 4 ID : 4410091464871

Q.15 दिए गए वाक्य में उचित प्रेरणार्थक क्रिया शब्द का चयन करके रिक्त स्थान की पूर्ति करें
मयंक अपने भाई को फुटबॉल----- है।

- Ans
- 1. लिखवाना
 - 2. खेल
 - 3. लिखवाया
 - 4. खिलवाता

Question ID : 441009374817
Option 1 ID : 4410091464856
Option 2 ID : 4410091464855
Option 3 ID : 4410091464858
Option 4 ID : 4410091464857

Comprehension:

गद्यांश के आधार पर प्रश्नों के उत्तर दें।
उत्तर भारत की सभी भाषाएँ प्रायः संस्कृत से निकली हैं, और उन सबके शब्दों में पारिवारिक समानता है। दक्षिण की भाषाएँ भी संस्कृत से प्रभावित हुई हैं। उन्होंने भी थोड़ी-बहुत मात्रा में संस्कृत की शब्दावली ग्रहण की, किसी ने थोड़ी तो किसी ने बहुत। उर्दू को छोड़कर प्रायः सभी भाषाओं की वर्णमाला एक नहीं तो एक सी है। केवल लिपि का भेद है। मराठी और देव-भाषा संस्कृत की लिपि सामान है। संस्कृत की परिनिष्ठित लिपि होने के कारण देवनागरी प्रायः सभी प्रांतों में पहचानी जाती है। उर्दू का लिपि भेद होते हुए भी हिंदी के साथ भाषा-साम्य है। भाषा की जमीन और व्याकरण प्रायः एक से हैं, सिर्फ बेल-बूटे फारसी-अरबी के हैं। यही कारण है कि उर्दू को हिंदी से विलग नितान्त स्वतंत्र और भिन्न भाषा के रूप में भाषा-वैज्ञानिक स्वीकार नहीं करते, अपितु उसे हिंदी भाषा की ही एक अन्य शैली मानते हैं।

SubQuestion No : 16

Q.16 गद्यांश में प्रयुक्त शब्द 'साम्य' का पर्यायवाची है-

- Ans
- 1. वैविध्य
 - 2. समानता
 - 3. वैषम्य
 - 4. एकता

Question ID : 441009374844
Option 1 ID : 4410091464958
Option 2 ID : 4410091464955
Option 3 ID : 4410091464956
Option 4 ID : 4410091464957

Comprehension:

गद्यांश के आधार पर प्रश्नों के उत्तर दें।
उत्तर भारत की सभी भाषाएँ प्रायः संस्कृत से निकली हैं, और उन सबके शब्दों में पारिवारिक समानता है। दक्षिण की भाषाएँ भी संस्कृत से प्रभावित हुई हैं। उन्होंने भी थोड़ी-बहुत मात्रा में संस्कृत की शब्दावली ग्रहण की, किसी ने थोड़ी तो किसी ने बहुत। उर्दू को छोड़कर प्रायः सभी भाषाओं की वर्णमाला एक नहीं तो एक सी है। केवल लिपि का भेद है। मराठी और देव-भाषा संस्कृत की लिपि सामान है। संस्कृत की परिनिष्ठित लिपि होने के कारण देवनागरी प्रायः सभी प्रांतों में पहचानी जाती है। उर्दू का लिपि भेद होते हुए भी हिंदी के साथ भाषा-साम्य है। भाषा की जमीन और व्याकरण प्रायः एक से हैं, सिर्फ बेल-बूटे फारसी-अरबी के हैं। यही कारण है कि उर्दू को हिंदी से विलग नितान्त स्वतंत्र और भिन्न भाषा के रूप में भाषा-वैज्ञानिक स्वीकार नहीं करते, अपितु उसे हिंदी भाषा की ही एक अन्य शैली मानते हैं।

SubQuestion No : 17

Q.17 गद्यांश के लिए सर्वाधिक उपयुक्त शीर्षक का चयन करें-

- Ans
- 1. संस्कृत और उर्दू की समानता
 - 2. हिंदी उर्दू विवाद
 - 3. देवनागरी लिपि और भारतीय भाषाएँ
 - 4. संस्कृत और भारतीय भाषाएँ

Question ID : 441009374842
Option 1 ID : 4410091464949
Option 2 ID : 4410091464947
Option 3 ID : 4410091464950
Option 4 ID : 4410091464948

Comprehension:

गद्यांश के आधार पर प्रश्नों के उत्तर दें।

उत्तर भारत की सभी भाषाएँ प्रायः संस्कृत से निकली हैं, और उन सबके शब्दों में पारिवारिक समानता है। दक्षिण की भाषाएँ भी संस्कृत से प्रभावित हुई हैं। उन्होंने भी थोड़ी-बहुत मात्रा में संस्कृत की शब्दावली ग्रहण की, किसी ने थोड़ी तो किसी ने बहुत। उर्दू को छोड़कर प्रायः सभी भाषाओं की वर्णमाला एक नहीं तो एक सी है। केवल लिपि का भेद है। मराठी और देव-भाषा संस्कृत की लिपि सामान है। संस्कृत की परिनिष्ठित लिपि होने के कारण देवनागरी प्रायः सभी प्रांतों में पहचानी जाती है। उर्दू का लिपि भेद होते हुए भी हिंदी के साथ भाषा-साम्य है। भाषा की जमीन और व्याकरण प्रायः एक से हैं, सिर्फ बेल-बूटे फारसी-अरबी के हैं। यही कारण है कि उर्दू को हिंदी से विलग नितान्त स्वतंत्र और भिन्न भाषा के रूप में भाषा-वैज्ञानिक स्वीकार नहीं करते, अपितु उसे हिंदी भाषा की ही एक अन्य शैली मानते हैं।

SubQuestion No : 18

Q.18 गद्यांश में कौन सा शब्द विदेशज है-

- Ans
- 1. वर्ण
 - 2. पारिवारिक
 - 3. हिंदी
 - 4. लिपि

Question ID : 441009374846
Option 1 ID : 4410091464965
Option 2 ID : 4410091464966
Option 3 ID : 4410091464964
Option 4 ID : 4410091464963

Comprehension:

गद्यांश के आधार पर प्रश्नों के उत्तर दें।

उत्तर भारत की सभी भाषाएँ प्रायः संस्कृत से निकली हैं, और उन सबके शब्दों में पारिवारिक समानता है। दक्षिण की भाषाएँ भी संस्कृत से प्रभावित हुई हैं। उन्होंने भी थोड़ी-बहुत मात्रा में संस्कृत की शब्दावली ग्रहण की, किसी ने थोड़ी तो किसी ने बहुत। उर्दू को छोड़कर प्रायः सभी भाषाओं की वर्णमाला एक नहीं तो एक सी है। केवल लिपि का भेद है। मराठी और देव-भाषा संस्कृत की लिपि सामान है। संस्कृत की परिनिष्ठित लिपि होने के कारण देवनागरी प्रायः सभी प्रांतों में पहचानी जाती है। उर्दू का लिपि भेद होते हुए भी हिंदी के साथ भाषा-साम्य है। भाषा की जमीन और व्याकरण प्रायः एक से हैं, सिर्फ बेल-बूटे फारसी-अरबी के हैं। यही कारण है कि उर्दू को हिंदी से विलग नितान्त स्वतंत्र और भिन्न भाषा के रूप में भाषा-वैज्ञानिक स्वीकार नहीं करते, अपितु उसे हिंदी भाषा की ही एक अन्य शैली मानते हैं।

SubQuestion No : 19

Q.19 कौन सी भाषा लिपि की दृष्टि से भारतीय नहीं है-

- Ans
- 1. मलयालम
 - 2. उर्दू
 - 3. मराठी
 - 4. हिंदी

Question ID : 441009374843
Option 1 ID : 4410091464954
Option 2 ID : 4410091464952
Option 3 ID : 4410091464953
Option 4 ID : 4410091464951

Comprehension:

गद्यांश के आधार पर प्रश्नों के उत्तर दें।

उत्तर भारत की सभी भाषाएँ प्रायः संस्कृत से निकली हैं, और उन सबके शब्दों में पारिवारिक समानता है। दक्षिण की भाषाएँ भी संस्कृत से प्रभावित हुई हैं। उन्होंने भी थोड़ी-बहुत मात्रा में संस्कृत की शब्दावली ग्रहण की, किसी ने थोड़ी तो किसी ने बहुत। उर्दू को छोड़कर प्रायः सभी भाषाओं की वर्णमाला एक नहीं तो एक सी है। केवल लिपि का भेद है। मराठी और देव-भाषा संस्कृत की लिपि सामान है। संस्कृत की परिनिष्ठित लिपि होने के कारण देवनागरी प्रायः सभी प्रांतों में पहचानी जाती है। उर्दू का लिपि भेद होते हुए भी हिंदी के साथ भाषा-साम्य है। भाषा की जमीन और व्याकरण प्रायः एक से हैं, सिर्फ बेल-बूटे फारसी-अरबी के हैं। यही कारण है कि उर्दू को हिंदी से विलग नितान्त स्वतंत्र और भिन्न भाषा के रूप में भाषा-वैज्ञानिक स्वीकार नहीं करते, अपितु उसे हिंदी भाषा की ही एक अन्य शैली मानते हैं।

SubQuestion No : 20

Q.20 'अपितु उसे हिंदी भाषा की ही एक अन्य शैली मानते हैं।' वाक्य का आशय है-

- Ans 1. गद्य और पद्य की भांति उर्दू भी एक लेखन शैली है।
2. हिंदी भाषा के विभिन्न स्थानीय रूपों की भांति उर्दू भी इसका एक खड़ीबोली पर आधारित भाषिक-रूप ही है।
3. उर्दू भाषा हिंदी को फारसी में लिखने की एक कला मात्र है, इसीलिए ऐसा कहा गया है।
4. हिंदी को अलग-अलग लिपियों में लिखने की परंपरा रही है और उर्दू इसी का एक उदाहरण है।

Question ID : 441009374845
Option 1 ID : 4410091464959
Option 2 ID : 4410091464961
Option 3 ID : 4410091464962
Option 4 ID : 4410091464960

Section : Test of English Language and Comprehension

Q.1 Select the most appropriate meaning of the given proverb.

After victory, tighten your helmet cord

- Ans 1. It is important to relax after a victory
2. Celebrate your victory with a sense of pride
3. You should always remain humble in victory
4. Always be cautious, even after achieving success

Question ID : 441009290221
Option 1 ID : 4410091127818
Option 2 ID : 4410091127817
Option 3 ID : 4410091127819
Option 4 ID : 4410091127816

Q.2 Select the most appropriate option that rectifies the incorrectly spelt word in the given sentence.

The teachers avoid colloquial phrases in lectures given in the colleges as they seem too informal for academia.

- Ans 1. colloquial
2. colloqial
3. colloquail
4. colouqial

Question ID : 441009304966
Option 1 ID : 4410091186534
Option 2 ID : 4410091186536
Option 3 ID : 4410091186537
Option 4 ID : 4410091186535

Q.3 Sentences of a paragraph are given below. While the first and the last sentences (S1 and S6) are in the correct order, the sentences in between are jumbled up. Arrange the sentences in the correct order to form a meaningful and coherent paragraph.

- S1) Unhappiness and discontent spring not only from poverty.
 P) Man is a strange creature, fundamentally different from other animals.
 Q) If they are undeveloped and unsatisfied, he may have all the comforts of wealth but will still feel that life is not worthwhile.
 R) He has far horizons, invariable hopes and spiritual powers.
 S) What is missing in our age is the soul; there is nothing wrong with the body.
 S6) We suffer from a sickness of the spirit, and hence we should discover our roots in the eternal.

- Ans 1. PSQR
 2. PRSQ
 3. SPQR
 4. SPRQ

Question ID : 441009290388
 Option 1 ID : 4410091128487
 Option 2 ID : 4410091128490
 Option 3 ID : 4410091128489
 Option 4 ID : 4410091128488

Q.4 Select the option that can be used as a one-word substitute for the underlined segment in the given sentence.

The teacher, an expert in the art of dictionary making, was felicitated by the education department on Teacher's Day.

- Ans 1. Etymology
 2. Linguistics
 3. Lexicography
 4. Philology

Question ID : 441009301193
 Option 1 ID : 4410091171890
 Option 2 ID : 4410091171888
 Option 3 ID : 4410091171889
 Option 4 ID : 4410091171891

Q.5 Identify the INCORRECTLY spelt word in the given sentence.
 Despite their disapproval of her complicated methods, they still recognised her sincere abhorrance of institutional injustice.

- Ans 1. injustice
 2. abhorrance
 3. institutional
 4. disapproval

Question ID : 441009304881
 Option 1 ID : 4410091186189
 Option 2 ID : 4410091186187
 Option 3 ID : 4410091186188
 Option 4 ID : 4410091186186

Q.6 Select the most appropriate option to fill in the blank. If no article is required, select the option with 'No article required'.

He's looking for _____ solution to the problem.

- Ans
- 1. No article required
 - 2. the
 - 3. an
 - 4. a

Question ID : 441009298719
Option 1 ID : 4410091161913
Option 2 ID : 4410091161912
Option 3 ID : 4410091161911
Option 4 ID : 4410091161910

Q.7 Select the most appropriate option to fill in the blank.

He reads _____ to analyse the comprehension text.

- Ans
- 1. lazily
 - 2. badly
 - 3. thoroughly
 - 4. angrily

Question ID : 441009294571
Option 1 ID : 4410091145372
Option 2 ID : 4410091145374
Option 3 ID : 4410091145373
Option 4 ID : 4410091145371

Q.8 Select the most appropriate synonym of the underlined word in the given sentence.
We were astounded at the fulsome praise heaped upon the opposition party.

- Ans
- 1. Appropriate
 - 2. Excessive
 - 3. Restrained
 - 4. Measured

Question ID : 441009304768
Option 1 ID : 4410091185745
Option 2 ID : 4410091185744
Option 3 ID : 4410091185742
Option 4 ID : 4410091185743

Q.9 Select the most appropriate meaning of the given idiom.

A bull in a china shop

- Ans
- 1. One who is very skilled
 - 2. One who causes damage
 - 3. One who is very strong
 - 4. One who loves animals

Question ID : 441009290168
Option 1 ID : 4410091127604
Option 2 ID : 4410091127605
Option 3 ID : 4410091127606
Option 4 ID : 4410091127607

Q.10 Select the most appropriate ANTONYM of the underlined word in the given sentence.

He plunged into the turbid waters of the stream.

- Ans 1. Muddy
 2. Clear
 3. Deep
 4. Fresh

Question ID : 441009289268
Option 1 ID : 4410091124047
Option 2 ID : 4410091124048
Option 3 ID : 4410091124046
Option 4 ID : 4410091124049

Q.11 Sentences of a paragraph are given below. While the first and the last sentences (S1 and S6) are in the correct order, the sentences in between are jumbled up. Arrange the sentences in the correct order to form a meaningful and coherent paragraph.

- S1) In 1945, America faced two powerful enemies in World War II.
P) America found conventional weapons insufficient to crush them.
Q) These were Germany and Japan who posed strong opposition to America.
R) The result of this was the production of the atom bomb.
S) The government ordered scientists to conduct research and produce a new, deadly weapon.
S6) This was the weapon that ended the World War II.

- Ans 1. QPRS
 2. QPSR
 3. PQRS
 4. PQSR

Question ID : 441009290367
Option 1 ID : 4410091128405
Option 2 ID : 4410091128403
Option 3 ID : 4410091128404
Option 4 ID : 4410091128406

Q.12 Select the most appropriate option to fill in the blank.

John lost a large amount of money in gambling, _____ he still seems to live a lavish life.

- Ans 1. or
 2. because
 3. but
 4. nor

Question ID : 441009294531
Option 1 ID : 4410091145213
Option 2 ID : 4410091145214
Option 3 ID : 4410091145212
Option 4 ID : 4410091145211

Q.13 Select the most appropriate option to fill in the blank.

The crane easily _____ the accidental car.

- Ans
- 1. entered
 - 2. discussed
 - 3. developed
 - 4. lifted

Question ID : 441009297586
Option 1 ID : 4410091157418
Option 2 ID : 4410091157416
Option 3 ID : 4410091157417
Option 4 ID : 4410091157415

Q.14 Select the most appropriate option to fill in the blank.

This is _____ same dress that we saw at the previous showroom.

- Ans
- 1. the
 - 2. a
 - 3. No article
 - 4. an

Question ID : 441009298033
Option 1 ID : 4410091159223
Option 2 ID : 4410091159224
Option 3 ID : 4410091159226
Option 4 ID : 4410091159225

Q.15 Select the most appropriate option that can substitute the underlined words in the given text.

Her grandfather often spends evenings in the act of looking back upon past events, sharing stories of his childhood. Though some memories make him smile, others bring a quiet sadness.

- Ans
- 1. Retrospection
 - 2. Extrospection
 - 3. Circumspection
 - 4. Introspection

Question ID : 441009289212
Option 1 ID : 4410091123807
Option 2 ID : 4410091123808
Option 3 ID : 4410091123809
Option 4 ID : 4410091123806

Comprehension:

Read the passage and answer the following questions.

Today, a robust system of physical education plays an increasingly important role in the modern educational system. It emphasises the all-round development of an individual, carefully considering the various aspects of personality such as physical fitness, social adjustment, mental activeness, emotionally balanced life, cultural values and moral uprightness. The modern physical education system includes a diverse variety of activities within its programs; thus, a comprehensive physical education program necessitates meticulous planning for the effective organisation of its activities.

Planning plays a vital role in every field of life, ensuring optimal resource allocation and goal attainment. A well-structured physical education program sparks enthusiasm, boosts participation and enhances engagement. Strategic planning maximises the benefits of physical education and sports, fostering skill development and learning outcomes.

The success of a physical education program significantly depends upon efficient staffing, good direction, proper control, effective supervision, good coordination among stakeholders, clear chances of improvement, proactive strategies for overcoming shortcomings, etc. Planning in sports must strategically consider a suitable fixture for the tournament, ensuring fair play and maximum participation. There are various established types of fixtures in a tournament, such as Knock-out, League, Combination of Knock-out with League or vice versa, Ladder and Pyramid tournaments, each serving different purposes and event scales.

Strategic planning in physical education not only enhances program effectiveness but also fosters the holistic growth of students, preparing them for well-rounded personal and social development.

SubQuestion No : 16

Q.16 Which title best captures the main focus of the passage?

Ans ✓ 1. Strategic Planning for Effective Physical Education Programs

✗ 2. A Brief History of Physical Education Curricula

✗ 3. The History of Physical Education in Modern Schools

✗ 4. Types of Tournament Fixtures in Sports

Question ID : 441009291315

Option 1 ID : 4410091132102

Option 2 ID : 4410091132105

Option 3 ID : 4410091132103

Option 4 ID : 4410091132104

Comprehension:

Read the passage and answer the following questions.

Today, a robust system of physical education plays an increasingly important role in the modern educational system. It emphasises the all-round development of an individual, carefully considering the various aspects of personality such as physical fitness, social adjustment, mental activeness, emotionally balanced life, cultural values and moral uprightness. The modern physical education system includes a diverse variety of activities within its programs; thus, a comprehensive physical education program necessitates meticulous planning for the effective organisation of its activities.

Planning plays a vital role in every field of life, ensuring optimal resource allocation and goal attainment. A well-structured physical education program sparks enthusiasm, boosts participation and enhances engagement. Strategic planning maximises the benefits of physical education and sports, fostering skill development and learning outcomes.

The success of a physical education program significantly depends upon efficient staffing, good direction, proper control, effective supervision, good coordination among stakeholders, clear chances of improvement, proactive strategies for overcoming shortcomings, etc. Planning in sports must strategically consider a suitable fixture for the tournament, ensuring fair play and maximum participation. There are various established types of fixtures in a tournament, such as Knock-out, League, Combination of Knock-out with League or vice versa, Ladder and Pyramid tournaments, each serving different purposes and event scales.

Strategic planning in physical education not only enhances program effectiveness but also fosters the holistic growth of students, preparing them for well-rounded personal and social development.

SubQuestion No : 17

Q.17 What does the passage state as a key factor for the success of a physical education programme?

- Ans**
- 1. Student academic performance
 - 2. Advanced technological tools
 - 3. Efficient staffing and supervision
 - 4. Parental involvement

Question ID : 441009291316
Option 1 ID : 4410091132108
Option 2 ID : 4410091132106
Option 3 ID : 4410091132107
Option 4 ID : 4410091132109

Comprehension:

Read the passage and answer the following questions.

Today, a robust system of physical education plays an increasingly important role in the modern educational system. It emphasises the all-round development of an individual, carefully considering the various aspects of personality such as physical fitness, social adjustment, mental activeness, emotionally balanced life, cultural values and moral uprightness. The modern physical education system includes a diverse variety of activities within its programs; thus, a comprehensive physical education program necessitates meticulous planning for the effective organisation of its activities.

Planning plays a vital role in every field of life, ensuring optimal resource allocation and goal attainment. A well-structured physical education program sparks enthusiasm, boosts participation and enhances engagement. Strategic planning maximises the benefits of physical education and sports, fostering skill development and learning outcomes.

The success of a physical education program significantly depends upon efficient staffing, good direction, proper control, effective supervision, good coordination among stakeholders, clear chances of improvement, proactive strategies for overcoming shortcomings, etc. Planning in sports must strategically consider a suitable fixture for the tournament, ensuring fair play and maximum participation. There are various established types of fixtures in a tournament, such as Knock-out, League, Combination of Knock-out with League or vice versa, Ladder and Pyramid tournaments, each serving different purposes and event scales.

Strategic planning in physical education not only enhances program effectiveness but also fosters the holistic growth of students, preparing them for well-rounded personal and social development.

SubQuestion No : 18

Q.18 Which of the following words best describes the meaning of 'robust' as given in the passage?

- Ans 1. Strong
 2. Fragile
 3. Dull
 4. Weak

Question ID : 441009291317
Option 1 ID : 4410091132110
Option 2 ID : 4410091132111
Option 3 ID : 4410091132112
Option 4 ID : 4410091132113

Comprehension:

Read the passage and answer the following questions.

Today, a robust system of physical education plays an increasingly important role in the modern educational system. It emphasises the all-round development of an individual, carefully considering the various aspects of personality such as physical fitness, social adjustment, mental activeness, emotionally balanced life, cultural values and moral uprightness. The modern physical education system includes a diverse variety of activities within its programs; thus, a comprehensive physical education program necessitates meticulous planning for the effective organisation of its activities.

Planning plays a vital role in every field of life, ensuring optimal resource allocation and goal attainment. A well-structured physical education program sparks enthusiasm, boosts participation and enhances engagement. Strategic planning maximises the benefits of physical education and sports, fostering skill development and learning outcomes.

The success of a physical education program significantly depends upon efficient staffing, good direction, proper control, effective supervision, good coordination among stakeholders, clear chances of improvement, proactive strategies for overcoming shortcomings, etc. Planning in sports must strategically consider a suitable fixture for the tournament, ensuring fair play and maximum participation. There are various established types of fixtures in a tournament, such as Knock-out, League, Combination of Knock-out with League or vice versa, Ladder and Pyramid tournaments, each serving different purposes and event scales.

Strategic planning in physical education not only enhances program effectiveness but also fosters the holistic growth of students, preparing them for well-rounded personal and social development.

SubQuestion No : 19

Q.19 Identify the structure of the passage from the given options.

- Ans** ✓ 1. Descriptive
✗ 2. Chronological
✗ 3. Problem-solution
✗ 4. Comparative

Question ID : 441009291313
Option 1 ID : 4410091132097
Option 2 ID : 4410091132094
Option 3 ID : 4410091132095
Option 4 ID : 4410091132096

Comprehension:

Read the passage and answer the following questions.

Today, a robust system of physical education plays an increasingly important role in the modern educational system. It emphasises the all-round development of an individual, carefully considering the various aspects of personality such as physical fitness, social adjustment, mental activeness, emotionally balanced life, cultural values and moral uprightness. The modern physical education system includes a diverse variety of activities within its programs; thus, a comprehensive physical education program necessitates meticulous planning for the effective organisation of its activities.

Planning plays a vital role in every field of life, ensuring optimal resource allocation and goal attainment. A well-structured physical education program sparks enthusiasm, boosts participation and enhances engagement. Strategic planning maximises the benefits of physical education and sports, fostering skill development and learning outcomes.

The success of a physical education program significantly depends upon efficient staffing, good direction, proper control, effective supervision, good coordination among stakeholders, clear chances of improvement, proactive strategies for overcoming shortcomings, etc. Planning in sports must strategically consider a suitable fixture for the tournament, ensuring fair play and maximum participation. There are various established types of fixtures in a tournament, such as Knock-out, League, Combination of Knock-out with League or vice versa, Ladder and Pyramid tournaments, each serving different purposes and event scales.

Strategic planning in physical education not only enhances program effectiveness but also fosters the holistic growth of students, preparing them for well-rounded personal and social development.

SubQuestion No : 20

Q.20 What is the tone of the given passage?

- Ans 1. Emphatic
 2. Argumentative
 3. Critical
 4. Humorous

Question ID : 441009291314
Option 1 ID : 4410091132100
Option 2 ID : 4410091132098
Option 3 ID : 4410091132099
Option 4 ID : 4410091132101

Section : Discipline1

Q.1 One of the principles used in the REC kit is to _____ the content into _____ units of learning.

- Ans 1. break down; large
 2. teach; small
 3. teach; large
 4. break down; small

Question ID : 441009383497
Option 1 ID : 4410091499566
Option 2 ID : 4410091499567
Option 3 ID : 4410091499565
Option 4 ID : 4410091499564

Q.2 The birth weight becomes 3 times by _____.

- Ans 1. 6 months
 2. 1 year
 3. 1.5 years
 4. 2 years

Question ID : 441009330060
Option 1 ID : 4410091286705
Option 2 ID : 4410091286706
Option 3 ID : 4410091286707
Option 4 ID : 4410091286708

Q.3 What is the main reason family involvement is important in the education of children with disabilities?

- Ans 1. Families can fund the schools.
 2. Families know how to run schools.
 3. Families prefer traditional schooling methods.
 4. Families have an intimate knowledge of their child.

Question ID : 441009328232
Option 1 ID : 4410091279407
Option 2 ID : 4410091279406
Option 3 ID : 4410091279408
Option 4 ID : 4410091279409

Q.4 Learners with impairments are NOT a homogeneous group because:

- Ans 1. they live in similar environments
 2. their impairments and needs vary in type and severity
 3. all impairments are treated the same way everywhere
 4. they all have the same background

Question ID : 441009328223
Option 1 ID : 4410091279356
Option 2 ID : 4410091279355
Option 3 ID : 4410091279357
Option 4 ID : 4410091279354

Q.5 Why is early identification important for children with visual impairment?

- Ans 1. It only focuses on medical treatment
 2. It reduces the need for any assistance later
 3. It delays the start of intervention
 4. It helps provide timely support and intervention

Question ID : 441009338728
Option 1 ID : 4410091320891
Option 2 ID : 4410091320890
Option 3 ID : 4410091320888
Option 4 ID : 4410091320889

Q.6 Which of the following is an example of an attitudinal barrier in inclusive education?

- Ans
- 1. Unavailability of learning materials in accessible formats
 - 2. Poor classroom lighting
 - 3. Negative beliefs about students with disabilities
 - 4. Lack of ramps for wheelchair users

Question ID : 441009338615
Option 1 ID : 4410091320418
Option 2 ID : 4410091320419
Option 3 ID : 4410091320417
Option 4 ID : 4410091320416

Q.7 Hierarchy of human needs was proposed by _____.

- Ans
- 1. Maslow
 - 2. Luthans
 - 3. Bandura
 - 4. Pavlov

Question ID : 441009330114
Option 1 ID : 4410091286963
Option 2 ID : 4410091286966
Option 3 ID : 4410091286965
Option 4 ID : 4410091286964

Q.8 What was the initial motivation for the development of basic branches of mathematics such as arithmetic and algebra?

- Ans
- 1. Interest in the study of space
 - 2. Curiosity about abstract patterns
 - 3. The discovery of natural phenomena
 - 4. The need for counting and solving daily life problems

Question ID : 441009327941
Option 1 ID : 4410091278230
Option 2 ID : 4410091278227
Option 3 ID : 4410091278229
Option 4 ID : 4410091278228

Q.9 Vygotsky presented the _____ theory.

- Ans
- 1. cognitive development
 - 2. social learning
 - 3. psychosocial development
 - 4. social development

Question ID : 441009330028
Option 1 ID : 4410091286563
Option 2 ID : 4410091286565
Option 3 ID : 4410091286566
Option 4 ID : 4410091286564

Q.10 Children with hearing thresholds between _____ have a mild hearing loss.

- Ans 1. 26 and 40 dB
 2. 41 and 70 dB
 3. 71 and 90 dB
 4. 0 and 25 dB

Question ID : 441009343309
 Option 1 ID : 4410091339225
 Option 2 ID : 4410091339228
 Option 3 ID : 4410091339227
 Option 4 ID : 4410091339226

Q.11 What does dual sensory impairment or deaf blindness refer to?

- Ans 1. Temporary hearing loss
 2. Impairment of both hearing and vision
 3. Impairment of hearing only
 4. Impairment of vision only

Question ID : 441009338722
 Option 1 ID : 4410091320867
 Option 2 ID : 4410091320866
 Option 3 ID : 4410091320864
 Option 4 ID : 4410091320865

Q.12 What happens after the hypothesis is verified?

- Ans 1. The teacher gives marks
 2. Students memorise the result
 3. New knowledge is created
 4. Learning ends

Question ID : 441009337710
 Option 1 ID : 4410091316823
 Option 2 ID : 4410091316821
 Option 3 ID : 4410091316822
 Option 4 ID : 4410091316820

Q.13 What are the three aspects to consider in any instructional plan?

- Ans 1. Activities, assessments and feedback
 2. Teaching aids, discipline and communication
 3. Contents of activities, objectives of curriculum and environment creation
 4. Time, syllabus and textbook

Question ID : 441009328201
 Option 1 ID : 4410091279268
 Option 2 ID : 4410091279270
 Option 3 ID : 4410091279269
 Option 4 ID : 4410091279267

Q.14 The _____ will translate what is said by the lecturer or tutor into sign and will provide a voice-over for the deaf student's own signed contribution if required.

- Ans
- 1. decoder
 - 2. lip speaker
 - 3. communicator
 - 4. interpreter

Question ID : 441009343366
Option 1 ID : 4410091339455
Option 2 ID : 4410091339454
Option 3 ID : 4410091339456
Option 4 ID : 4410091339453

Q.15 According to the Salamanca Statement (1994), what is considered as the most effective way to promote inclusion for disabled children?

- Ans
- 1. Offering homeschooling options for disabled children
 - 2. Enrolling disabled children in neighbourhood regular schools
 - 3. Providing separate classrooms within regular schools
 - 4. Establishing special schools for disabled children

Question ID : 441009338016
Option 1 ID : 4410091318042
Option 2 ID : 4410091318041
Option 3 ID : 4410091318043
Option 4 ID : 4410091318040

Q.16 Which of the following is an example of extrinsic motivation?

- Ans
- 1. Doing homework to get good grades
 - 2. Studying because you enjoy learning
 - 3. Painting because you find it relaxing
 - 4. Running because you love the sport

Question ID : 441009327911
Option 1 ID : 4410091278109
Option 2 ID : 4410091278107
Option 3 ID : 4410091278110
Option 4 ID : 4410091278108

Q.17 Which of the following is a condition where light does not focus evenly on the retina, causing blurry images?

- Ans
- 1. Myopia
 - 2. Astigmatism
 - 3. Presbyopia
 - 4. Hyperopia

Question ID : 441009328254
Option 1 ID : 4410091279493
Option 2 ID : 4410091279495
Option 3 ID : 4410091279494
Option 4 ID : 4410091279492

Q.18 What is essential for achieving equal educational opportunities in a society?

- Ans
- 1. Standardised testing
 - 2. Private education system
 - 3. Equality in the social system
 - 4. Technological advancement

Question ID : 441009327887
 Option 1 ID : 4410091278017
 Option 2 ID : 4410091278018
 Option 3 ID : 4410091278015
 Option 4 ID : 4410091278016

Q.19 When was the Universal Declaration of Human Rights (UDHR) adopted?

- Ans
- 1. 1 January 1945
 - 2. 26 January 1950
 - 3. 15 August 1947
 - 4. 10 December 1948

Question ID : 441009328227
 Option 1 ID : 4410091279389
 Option 2 ID : 4410091279386
 Option 3 ID : 4410091279387
 Option 4 ID : 4410091279388

Q.20 What is the core aim of reflective teacher education?

- Ans
- 1. To develop reasoning on teaching methods and their impact
 - 2. To help trainees write better lesson plans
 - 3. To complete the syllabus on time
 - 4. To teach fixed teaching methods

Question ID : 441009328168
 Option 1 ID : 4410091279144
 Option 2 ID : 4410091279146
 Option 3 ID : 4410091279143
 Option 4 ID : 4410091279145

Section : Discipline2

Q.1 In designing a prosthetic classroom environment for children with multiple disabilities, which of the following best describes the use of a standing frame?

- Ans
- 1. A tool for upper limb therapy and writing practice
 - 2. A safety device to prevent falls during recess
 - 3. A support for napping during breaks
 - 4. An aid to reduce muscle tone and promote engagement in classroom activities

Question ID : 441009328908
 Option 1 ID : 4410091282046
 Option 2 ID : 4410091282047
 Option 3 ID : 4410091282045
 Option 4 ID : 4410091282044

Q.2 The IQ range of an educable mentally retarded child is _____.

- Ans
- 1. 36 to 51
 - 2. 20 to 49
 - 3. below 20
 - 4. 50 to 70

Question ID : 441009343722
Option 1 ID : 4410091340879
Option 2 ID : 4410091340876
Option 3 ID : 4410091340878
Option 4 ID : 4410091340877

Q.3 Who first used the term 'autism'?

- Ans
- 1. Jean Piaget
 - 2. BF Skinner
 - 3. Sigmund Freud
 - 4. Eugen Bleuler

Question ID : 441009340674
Option 1 ID : 4410091328708
Option 2 ID : 4410091328709
Option 3 ID : 4410091328706
Option 4 ID : 4410091328707

Q.4 What does enhancing self-esteem primarily help an individual to develop?

- Ans
- 1. Confidence and positive self-worth
 - 2. Negative thinking patterns
 - 3. Avoidance of social situations
 - 4. Dependence on others

Question ID : 441009340419
Option 1 ID : 4410091327703
Option 2 ID : 4410091327702
Option 3 ID : 4410091327705
Option 4 ID : 4410091327704

Q.5 Which factor accelerates acquisition of a conditioned response?

- Ans
- 1. Weak intensity of conditioned stimulus
 - 2. Random presentation of conditioned stimulus and un-conditioned stimulus
 - 3. More time between conditioned stimulus and un-conditioned stimulus
 - 4. High intensity of conditioned stimulus

Question ID : 441009328985
Option 1 ID : 4410091282354
Option 2 ID : 4410091282355
Option 3 ID : 4410091282353
Option 4 ID : 4410091282352

Q.6 _____ are braces worn externally to improve and strengthen mobility among students with CP.

- Ans
- 1. Bathing chairs
 - 2. Orthotic devices
 - 3. Prosthetic devices
 - 4. Standers

Question ID : 441009344164
 Option 1 ID : 4410091342615
 Option 2 ID : 4410091342613
 Option 3 ID : 4410091342614
 Option 4 ID : 4410091342616

Q.7 Which of the following best describes the principle of Universal Design for Learning (UDL) in the context of service delivery models for early childhood inclusive education?

- Ans
- 1. Designing a one-size-fits-all curriculum to ensure uniformity
 - 2. Focusing exclusively on specialised services outside the natural environment
 - 3. Prioritising academic content over social and emotional development
 - 4. Creating flexible learning environments that accommodate individual learning differences

Question ID : 441009340502
 Option 1 ID : 4410091328030
 Option 2 ID : 4410091328032
 Option 3 ID : 4410091328033
 Option 4 ID : 4410091328031

Q.8 In the A-B-C model of behaviour analysis, C stands for _____.

- Ans
- 1. Connection
 - 2. Conflict
 - 3. Cooperation
 - 4. Consequences

Question ID : 441009358878
 Option 1 ID : 4410091401521
 Option 2 ID : 4410091401520
 Option 3 ID : 4410091401519
 Option 4 ID : 4410091401518

Q.9 DTT is a method of teaching in which concepts are broken down into isolated targets and taught using a 4 step sequence: _____

- Ans
- 1. cue → response → pause → consequence
 - 2. cue → response → consequence → pause
 - 3. cue → pause → response → consequence
 - 4. cue → pause → consequence → response

Question ID : 441009347675
 Option 1 ID : 4410091356889
 Option 2 ID : 4410091356888
 Option 3 ID : 4410091356890
 Option 4 ID : 4410091356891

Q.10 Which of the following is a cognitive implication often observed in children with multiple disabilities, as related to functional limitations?

- Ans
- 1. Need for footrests in corner sitting
 - 2. Tendency to forget skills through disuse
 - 3. Non-ambulatory posture
 - 4. Presence of primitive reflexes

Question ID : 441009328912
Option 1 ID : 4410091282063
Option 2 ID : 4410091282061
Option 3 ID : 4410091282062
Option 4 ID : 4410091282060

Q.11 Why is 'W' sitting discouraged for children with cerebral palsy, despite its temporary postural stability?

- Ans
- 1. It overstretches the shoulder joints.
 - 2. It inhibits proper development of hip and knee joints.
 - 3. It promotes excessive flexibility in the ankle.
 - 4. It leads to reduced spinal curvature.

Question ID : 441009328886
Option 1 ID : 4410091281955
Option 2 ID : 4410091281956
Option 3 ID : 4410091281957
Option 4 ID : 4410091281954

Q.12 What are the two main branches of Behaviour Analysis?

- Ans
- 1. Experimental and Applied
 - 2. Consequential and Applied
 - 3. Applied and Collateral
 - 4. Experimental and Consequential

Question ID : 441009358852
Option 1 ID : 4410091401418
Option 2 ID : 4410091401419
Option 3 ID : 4410091401421
Option 4 ID : 4410091401420

Q.13 What is neural plasticity in early childhood?

- Ans
- 1. The brain's ability to change and adapt
 - 2. The ability to speak clearly
 - 3. The process of learning to walk
 - 4. The physical growth of muscles

Question ID : 441009340496
Option 1 ID : 4410091328006
Option 2 ID : 4410091328009
Option 3 ID : 4410091328007
Option 4 ID : 4410091328008

Q.14 What is the main objective of craft activities for persons with mental retardation in special education centres?

- Ans
- 1. Ensure large-scale production
 - 2. Generate high profit
 - 3. Keep them busy in recreational activity
 - 4. Train them in modern technologies

Question ID : 441009328860
Option 1 ID : 4410091281850
Option 2 ID : 4410091281851
Option 3 ID : 4410091281852
Option 4 ID : 4410091281853

Q.15 What is the most strongly recommended approach for teaching students with ASD?

- Ans
- 1. Verbal instructions
 - 2. Use of visual aids
 - 3. Written tests
 - 4. Group discussions

Question ID : 441009328864
Option 1 ID : 4410091281866
Option 2 ID : 4410091281867
Option 3 ID : 4410091281869
Option 4 ID : 4410091281868

Q.16 What is the main focus of the child-centered approach concerning guidance and counseling?

- Ans
- 1. Highlighting weaknesses of the child
 - 2. Focusing on the constructive side of parents and child
 - 3. Enforcing strict routines for the child
 - 4. Correcting parental behaviour strictly

Question ID : 441009328924
Option 1 ID : 4410091282108
Option 2 ID : 4410091282110
Option 3 ID : 4410091282111
Option 4 ID : 4410091282109

Q.17 According to NCERT and Samagra Shiksha guidelines in India, which of the following is a key skill or competency for a teacher acting as a counselor?

- Ans
- 1. Conducting active listening, empathy, and effective communication during counseling
 - 2. Designing school architecture and infrastructure
 - 3. Managing school financial budgets and accounts
 - 4. Planning extracurricular sports tournaments

Question ID : 441009340736
Option 1 ID : 4410091328957
Option 2 ID : 4410091328954
Option 3 ID : 4410091328955
Option 4 ID : 4410091328956

Q.18 A seat with a _____ is used for children who have tightness between their legs.

- Ans
- 1. pelvic strap
 - 2. ramp
 - 3. cut-out tray
 - 4. pommel

Question ID : 441009348372
 Option 1 ID : 4410091359798
 Option 2 ID : 4410091359797
 Option 3 ID : 4410091359799
 Option 4 ID : 4410091359796

Q.19 _____ are devices that are designed to mimic, augment or enhance human movements, providing assistance in various applications, including rehabilitation, industrial tasks and even military deployments.

- Ans
- 1. Wheelchairs
 - 2. Robotic exoskeletons
 - 3. Crutches
 - 4. Canes

Question ID : 441009344165
 Option 1 ID : 4410091342620
 Option 2 ID : 4410091342617
 Option 3 ID : 4410091342618
 Option 4 ID : 4410091342619

Q.20 Which of the following individuals is/are NOT typically member(s) of the IEP team?

- Ans
- 1. Counsellor
 - 2. Therapist
 - 3. Librarian
 - 4. Parents

Question ID : 441009328855
 Option 1 ID : 4410091281830
 Option 2 ID : 4410091281832
 Option 3 ID : 4410091281833
 Option 4 ID : 4410091281831

Section : Discipline3

Q.1 Teacher-student interactions are the clearest form of classroom _____.

- Ans
- 1. integrity
 - 2. inequities
 - 3. equities
 - 4. impartiality

Question ID : 441009355807
 Option 1 ID : 4410091389319
 Option 2 ID : 4410091389316
 Option 3 ID : 4410091389317
 Option 4 ID : 4410091389318

Q.2 Which is a pocket size calculating device in which beads are moved to do basic arithmetic operations as well as more advanced processes of calculations?

- Ans
- 1. Geometry kit
 - 2. Abacus
 - 3. Braille
 - 4. Taylor frame

Question ID : 441009356348
Option 1 ID : 4410091391498
Option 2 ID : 4410091391499
Option 3 ID : 4410091391501
Option 4 ID : 4410091391500

Q.3 Why must ICT be made accessible?

- Ans
- 1. To limit its use to professionals only
 - 2. To replace printed materials completely
 - 3. To increase the cost of technology
 - 4. To utilise its potential in assisting persons with disabilities

Question ID : 441009329035
Option 1 ID : 4410091282559
Option 2 ID : 4410091282558
Option 3 ID : 4410091282556
Option 4 ID : 4410091282557

Q.4 _____ is a term used to describe a physical, mental or sensory condition that affects a person's ability to perform certain tasks or activities.

- Ans
- 1. Handicap
 - 2. Accommodation
 - 3. Impairment
 - 4. Disability

Question ID : 441009350297
Option 1 ID : 4410091367519
Option 2 ID : 4410091367521
Option 3 ID : 4410091367518
Option 4 ID : 4410091367520

Q.5 Which of the following is a key goal of Community-Based Employment programmes for persons with disabilities?

- Ans
- 1. Limiting access to higher education opportunities
 - 2. Facilitating gainful employment within the local community
 - 3. Encouraging complete dependence on government aid
 - 4. Promoting isolation from mainstream society

Question ID : 441009340667
Option 1 ID : 4410091328681
Option 2 ID : 4410091328680
Option 3 ID : 4410091328678
Option 4 ID : 4410091328679

Q.6 How many total dot combinations are used in Braille to represent letters, punctuation and contractions?

- Ans 1. 36
2. 63
3. 52
4. 26

Question ID : 441009341074
Option 1 ID : 4410091330288
Option 2 ID : 4410091330286
Option 3 ID : 4410091330285
Option 4 ID : 4410091330287

Q.7 Multimedia helps cater to different:

- Ans 1. uniform learning levels
2. age groups only
3. language abilities only
4. learning preferences and rates

Question ID : 441009340947
Option 1 ID : 4410091329781
Option 2 ID : 4410091329783
Option 3 ID : 4410091329784
Option 4 ID : 4410091329782

Q.8 Why is the sense of hearing considered vital in Orientation and Mobility (O&M) training for visually impaired individuals?

- Ans 1. It helps them read Braille faster.
2. It replaces the sense of smell.
3. It acts as their long-range sense to gather environmental clues.
4. It is the only sense used in navigation.

Question ID : 441009341116
Option 1 ID : 4410091330453
Option 2 ID : 4410091330456
Option 3 ID : 4410091330455
Option 4 ID : 4410091330454

Q.9 The slate and stylus for braille are _____ tools.

- Ans 1. speaking
2. listening
3. writing
4. reading

Question ID : 441009356289
Option 1 ID : 4410091391256
Option 2 ID : 4410091391257
Option 3 ID : 4410091391254
Option 4 ID : 4410091391255

Q.10 Which of the following tools is commonly recommended during mobility training for visually impaired persons?

- Ans 1. Long cane
 2. Screen reader
 3. Spectacles
 4. Braille printer

Question ID : 441009341126
Option 1 ID : 4410091330495
Option 2 ID : 4410091330494
Option 3 ID : 4410091330496
Option 4 ID : 4410091330493

Q.11 Which of the following types of canes is made from a rigid one-piece aluminum?

- Ans 1. Folding cane
 2. Rubber cane
 3. White long cane
 4. Electronic cane

Question ID : 441009341136
Option 1 ID : 4410091330533
Option 2 ID : 4410091330536
Option 3 ID : 4410091330534
Option 4 ID : 4410091330535

Q.12 The term interactive video referred to a pioneering form of interactive _____.

- Ans 1. videotape
 2. graphics
 3. videodisc
 4. multimedia

Question ID : 441009348807
Option 1 ID : 4410091361627
Option 2 ID : 4410091361629
Option 3 ID : 4410091361628
Option 4 ID : 4410091361626

Q.13 What does the term 'audio-visual' refer to in the context of education?

- Ans 1. Tools that engage learners through reading and writing
 2. Tools that offer simultaneous hearing and seeing experiences
 3. Tools that replace all forms of traditional teaching
 4. Tools that only provide written content

Question ID : 441009329064
Option 1 ID : 4410091282665
Option 2 ID : 4410091282666
Option 3 ID : 4410091282667
Option 4 ID : 4410091282664

Q.14 The upper arm and forearm can be used to protect _____ of the body, like chest and head, from open doors, comers of walls, sharp wall curves or any other objects placed vertically in the path.

- Ans 1. the upper parts
 2. the lower parts
 3. the middle parts
 4. the lateral parts

Question ID : 441009356402
Option 1 ID : 4410091391754
Option 2 ID : 4410091391755
Option 3 ID : 4410091391756
Option 4 ID : 4410091391757

Q.15 Self-determination is important for all people, but it is more difficult for young people _____ to learn.

- Ans 1. without good health
 2. without disabilities
 3. with disabilities
 4. with accomodation

Question ID : 441009347852
Option 1 ID : 4410091357606
Option 2 ID : 4410091357604
Option 3 ID : 4410091357605
Option 4 ID : 4410091357607

Q.16 How does gender intensify the experience of disability for women and men?

- Ans 1. By increasing their access to education and employment
 2. By making them equally more visible in public life
 3. By reducing their dependence on others
 4. For women, it reinforces helplessness; for men, it challenges traditional masculinity

Question ID : 441009329116
Option 1 ID : 4410091282875
Option 2 ID : 4410091282872
Option 3 ID : 4410091282873
Option 4 ID : 4410091282874

Q.17 UN Women has supported the promotion of inclusive electoral processes and the political participation of women with disabilities. This support includes:

- Ans 1. fewer women lead organisations of persons with disabilities
 2. systemic marginalisation and structural barriers
 3. capacity-building and sensitisation of security forces to ensure the needs of persons with disabilities are met, especially those of women
 4. national coordination mechanisms on disability matters

Question ID : 441009352630
Option 1 ID : 4410091376776
Option 2 ID : 4410091376777
Option 3 ID : 4410091376778
Option 4 ID : 4410091376775

Q.18 How has the feature of live streaming, enabled by Web 2.0 and 3.0 technologies, benefited teachers in education?

- Ans
- 1. It allows teachers to restrict access to information.
 - 2. It limits learning to only in-person classroom settings.
 - 3. It eliminates the need for audio-visual tools.
 - 4. It enables teachers to deliver and record lectures or demonstrations from remote locations.

Question ID : 441009329082
 Option 1 ID : 4410091282736
 Option 2 ID : 4410091282739
 Option 3 ID : 4410091282737
 Option 4 ID : 4410091282738

Q.19 What is the primary goal of Community Based Rehabilitation (CBR)?

- Ans
- 1. To isolate persons with disabilities from society
 - 2. To empower persons with disabilities within their own communities
 - 3. To institutionalise rehabilitation services
 - 4. To treat individuals only in hospitals

Question ID : 441009340641
 Option 1 ID : 4410091328575
 Option 2 ID : 4410091328576
 Option 3 ID : 4410091328577
 Option 4 ID : 4410091328574

Q.20 Braille is a system of touch reading and writing for _____ persons in which raised dots represent the letters of the alphabet.

- Ans
- 1. hearing impaired
 - 2. intellectually disabled
 - 3. visually impaired
 - 4. autistic

Question ID : 441009355890
 Option 1 ID : 4410091389664
 Option 2 ID : 4410091389667
 Option 3 ID : 4410091389665
 Option 4 ID : 4410091389666

Section : Discipline4

Q.1 What is the primary purpose of the Infant-Toddler Checklist in autism spectrum disorder assessment?

- Ans
- 1. To diagnose autism definitively
 - 2. To screen for early communication and social delays
 - 3. To evaluate motor coordination
 - 4. To assess academic skills

Question ID : 441009343284
 Option 1 ID : 4410091339125
 Option 2 ID : 4410091339126
 Option 3 ID : 4410091339128
 Option 4 ID : 4410091339127

Q.2 Symbols used in alternative and augmentative communication can represent:

- Ans
- 1. only gestures and facial expressions
 - 2. only written words
 - 3. only objects and actions
 - 4. objects, actions, concepts and emotions

Question ID : 441009329314
Option 1 ID : 4410091283683
Option 2 ID : 4410091283682
Option 3 ID : 4410091283680
Option 4 ID : 4410091283681

Q.3 David Kolb, an educational researcher, developed a _____ reflective model.

- Ans
- 1. three-stage
 - 2. five-stage
 - 3. four-stage
 - 4. two-stage

Question ID : 441009361656
Option 1 ID : 4410091412758
Option 2 ID : 4410091412757
Option 3 ID : 4410091412755
Option 4 ID : 4410091412756

Q.4 What are the two main features of ADHD?

- Ans
- 1. Inattention and hyperactivity-impulsivity
 - 2. Aggression and anxiety
 - 3. Hyperactivity and social withdrawal
 - 4. Impulsivity and communication delay

Question ID : 441009329325
Option 1 ID : 4410091283729
Option 2 ID : 4410091283728
Option 3 ID : 4410091283730
Option 4 ID : 4410091283731

Q.5 Which of the following is a critical factor in ensuring the accuracy of differential assessment in Autism Spectrum Disorders (ASD)?

- Ans
- 1. Comprehensive training of assessors in ASD-specific diagnostic tools and protocols
 - 2. Ignoring co-occurring conditions during the assessment process
 - 3. Relying solely on parental reports without observational data
 - 4. Use of a single standardised test without clinical judgment

Question ID : 441009343292
Option 1 ID : 4410091339158
Option 2 ID : 4410091339160
Option 3 ID : 4410091339159
Option 4 ID : 4410091339157

Q.6 How can a teacher use the results from the BASIC-MR scale?

- Ans
- 1. To replace the regular curriculum
 - 2. To measure IQ levels only
 - 3. To select sports activities
 - 4. To design an IEP and group teaching plans

Question ID : 441009341216
Option 1 ID : 4410091330854
Option 2 ID : 4410091330855
Option 3 ID : 4410091330852
Option 4 ID : 4410091330853

Q.7 The context that refers to the climate and environment of a communication is _____.

- Ans
- 1. cultural context
 - 2. temporal context
 - 3. physical context
 - 4. social-psychological context

Question ID : 441009361732
Option 1 ID : 4410091413061
Option 2 ID : 4410091413060
Option 3 ID : 4410091413062
Option 4 ID : 4410091413059

Q.8 Paradigms of education are constantly _____.

- Ans
- 1. degrading
 - 2. devolving
 - 3. evolving
 - 4. stagnating

Question ID : 441009356435
Option 1 ID : 4410091391920
Option 2 ID : 4410091391921
Option 3 ID : 4410091391918
Option 4 ID : 4410091391919

Q.9 According to Oralism philosophy, which of the following supports speech perception in hearing impaired individuals?

- Ans
- 1. Only hearing aids
 - 2. Visual cues such as lip reading
 - 3. Only speech reading
 - 4. Only sign language

Question ID : 441009329272
Option 1 ID : 4410091283496
Option 2 ID : 4410091283497
Option 3 ID : 4410091283498
Option 4 ID : 4410091283499

Q.10 What is the primary purpose of assessing basic curricular skills in students with learning disabilities?

- Ans 1. To identify specific learning needs and guide instruction
2. To compare students with peers without disabilities
3. To focus only on memorisation
4. To assign grades only

Question ID : 441009343257
 Option 1 ID : 4410091339018
 Option 2 ID : 4410091339019
 Option 3 ID : 4410091339020
 Option 4 ID : 4410091339017

Q.11 In the organisational framework for Augmentative and Alternative Communication (AAC), which type of communication is characterised by the user's ability to generate novel messages independently of immediate situational context, often involving creative language use?

- Ans 1. Creative communication
2. Context-dependent communication
3. Situational communication
4. Independent communication

Question ID : 441009343230
 Option 1 ID : 4410091338912
 Option 2 ID : 4410091338910
 Option 3 ID : 4410091338909
 Option 4 ID : 4410091338911

Q.12 In DSM-5, which of the following disorders were merged under the single term autism spectrum disorder?

- Ans 1. Asperger's, Attention deficit hyperactivity disorder, Communication disorder
2. Autism, Obsessive-compulsive disorder, Dyslexia
3. Autistic disorder, Asperger's disorder, PDD-NOS, Childhood disintegrative disorder
4. Attention deficit hyperactivity disorder, Asperger's, Rett syndrome

Question ID : 441009329330
 Option 1 ID : 4410091283747
 Option 2 ID : 4410091283746
 Option 3 ID : 4410091283745
 Option 4 ID : 4410091283744

Q.13 Why is early auditory stimulation critical for children with hearing impairment in the context of oralism?

- Ans 1. It prevents the need for any assistive hearing devices.
2. It ensures children can read and write at an early age.
3. It allows children to learn multiple languages simultaneously.
4. It helps in developing neural pathways essential for speech and language acquisition.

Question ID : 441009362110
 Option 1 ID : 4410091414638
 Option 2 ID : 4410091414637
 Option 3 ID : 4410091414635
 Option 4 ID : 4410091414636

Q.14 Which of the following best describes hyperlexia in children with autism spectrum disorders?

- Ans 1. Over-sensitivity to sensory stimuli only
2. Difficulty understanding and using social language despite strong decoding skills
3. Strong motor coordination skills
4. Complete absence of verbal communication

Question ID : 441009343278
Option 1 ID : 4410091339103
Option 2 ID : 4410091339101
Option 3 ID : 4410091339104
Option 4 ID : 4410091339102

Q.15 Motherese' is characterised by ____ speech.

- Ans 1. purr
2. undertone
3. murmur
4. exaggerated

Question ID : 441009361167
Option 1 ID : 4410091410816
Option 2 ID : 4410091410814
Option 3 ID : 4410091410815
Option 4 ID : 4410091410813

Q.16 At approximately what age do most children begin to combine two words to form simple sentences, indicating a key milestone in language development?

- Ans 1. 6 months
2. 18 to 24 months
3. 12 months
4. 36 months

Question ID : 441009362139
Option 1 ID : 4410091414763
Option 2 ID : 4410091414765
Option 3 ID : 4410091414764
Option 4 ID : 4410091414766

Q.17 What is a key activity recommended for developing middle-order expressive skills in the Indian Sign Language (ISL)?

- Ans 1. Expressing feelings and narratives through natural signing in conversation
2. Limiting communication to finger spelling only
3. Memorising the ISL dictionary
4. Using repetitive single signs in isolation

Question ID : 441009362128
Option 1 ID : 4410091414721
Option 2 ID : 4410091414722
Option 3 ID : 4410091414719
Option 4 ID : 4410091414720

Q.18 What does deafness indicate?

- Ans 1. Temporary hearing loss
 2. Profound congenital irreversible hearing loss
 3. Mild hearing loss
 4. Fluctuating hearing impairment

Question ID : 441009329279
 Option 1 ID : 4410091283534
 Option 2 ID : 4410091283535
 Option 3 ID : 4410091283532
 Option 4 ID : 4410091283533

Q.19 One of the most commonly used sign languages in the world is the _____.

- Ans 1. French sign language
 2. American sign language
 3. British sign language
 4. Japanese sign language

Question ID : 441009361525
 Option 1 ID : 4410091412244
 Option 2 ID : 4410091412243
 Option 3 ID : 4410091412245
 Option 4 ID : 4410091412246

Q.20 Which of the following is NOT one of the five domains assessed by the Functional analysis checklist?

- Ans 1. Personal
 2. Recreational
 3. Emotional
 4. Social

Question ID : 441009341200
 Option 1 ID : 4410091330788
 Option 2 ID : 4410091330790
 Option 3 ID : 4410091330791
 Option 4 ID : 4410091330789

Section : Discipline5

Q.1 Which of the following is NOT an early sign of autism in infants?

- Ans 1. Not responding to their name
 2. Not reaching out to be picked up
 3. Crying after being fed
 4. Not making eye contact

Question ID : 441009341224
 Option 1 ID : 4410091330889
 Option 2 ID : 4410091330886
 Option 3 ID : 4410091330888
 Option 4 ID : 4410091330887

Q.2 Which measure of central tendency is most affected by extreme scores?

- Ans
- 1. Mode
 - 2. Range
 - 3. Mean
 - 4. Median

Question ID : 441009329378
Option 1 ID : 4410091283940
Option 2 ID : 4410091283941
Option 3 ID : 4410091283938
Option 4 ID : 4410091283939

Q.3 Which of the following curricular adaptations is most effective in addressing the sensory processing challenges faced by children with Autism Spectrum Disorder (ASD) in inclusive classrooms?

- Ans
- 1. Reducing academic content to the lowest grade level available
 - 2. Providing sensory breaks and using multi-sensory instructional methods
 - 3. Eliminating social interaction activities to avoid overstimulation
 - 4. Replacing all group activities with independent seatwork

Question ID : 441009343313
Option 1 ID : 4410091339241
Option 2 ID : 4410091339242
Option 3 ID : 4410091339243
Option 4 ID : 4410091339244

Q.4 A key benefit of family involvement in inclusive education is:

- Ans
- 1. increased dependency on special educators
 - 2. more standardised testing
 - 3. reduction in financial burden on schools
 - 4. improved student success regardless of socio-economic status

Question ID : 441009341266
Option 1 ID : 4410091331056
Option 2 ID : 4410091331058
Option 3 ID : 4410091331055
Option 4 ID : 4410091331057

Q.5 What is a common challenge faced by students with ASD in a school environment?

- Ans
- 1. Excessive involvement in group-based shared tasks
 - 2. Excessive interest in extracurricular activities
 - 3. Ability to manage daily routines with ease
 - 4. Difficulty adapting to changing stimuli and expectations

Question ID : 441009329346
Option 1 ID : 4410091283804
Option 2 ID : 4410091283807
Option 3 ID : 4410091283805
Option 4 ID : 4410091283806

Q.6 Which of the following conditions is most accurately associated with both genetic and prenatal etiological factors contributing to developmental disabilities?

- Ans
- 1. Fetal Alcohol Syndrome
 - 2. Down Syndrome
 - 3. Traumatic Brain Injury
 - 4. Lead Poisoning

Question ID : 441009343387
 Option 1 ID : 4410091339535
 Option 2 ID : 4410091339536
 Option 3 ID : 4410091339534
 Option 4 ID : 4410091339537

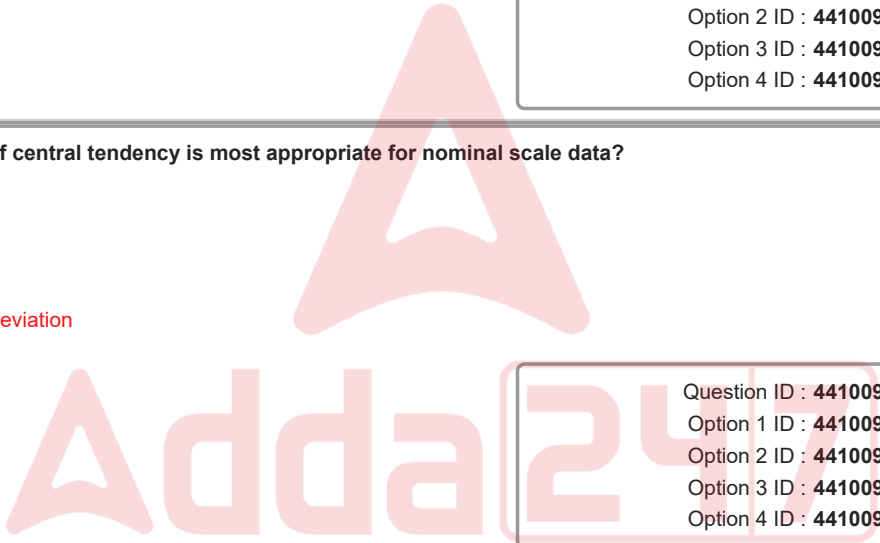
Q.7 What is the first step in planning for assistive technology for a student with special needs?

- Ans
- 1. Sending the student to a special school
 - 2. Conducting a need assessment to understand the student's strengths and challenges
 - 3. Purchasing available devices
 - 4. Asking the student's friends for recommendations

Question ID : 441009343416
 Option 1 ID : 4410091339657
 Option 2 ID : 4410091339656
 Option 3 ID : 4410091339654
 Option 4 ID : 4410091339655

Q.8 Which measure of central tendency is most appropriate for nominal scale data?

- Ans
- 1. Median
 - 2. Mode
 - 3. Mean
 - 4. Standard deviation



Question ID : 441009329382
 Option 1 ID : 4410091283951
 Option 2 ID : 4410091283952
 Option 3 ID : 4410091283950
 Option 4 ID : 4410091283953

Q.9 Which assessment method is most effective for evaluating a child's functional communication skills in everyday settings?

- Ans
- 1. Standardised language tests only
 - 2. Pure-tone audiometry
 - 3. Brain imaging techniques
 - 4. Parent and teacher interviews combined with naturalistic observation

Question ID : 441009343450
 Option 1 ID : 4410091339786
 Option 2 ID : 4410091339788
 Option 3 ID : 4410091339789
 Option 4 ID : 4410091339787

Q.10 Which of the following teaching strategies is most effective in addressing the diverse learning needs in an inclusive classroom?

- Ans
- 1. Assigning the same homework to all students regardless of ability
 - 2. Lecture-based instruction for the whole class
 - 3. One-size-fits-all worksheets
 - 4. Differentiated instruction based on student readiness, interest, and learning profile

Question ID : 441009343378
 Option 1 ID : 4410091339501
 Option 2 ID : 4410091339498
 Option 3 ID : 4410091339499
 Option 4 ID : 4410091339500

Section : Teaching Methodology

Q.1 Which of the following best describes the relationship between growth and development in children?

- Ans
- 1. Growth and development are unrelated processes that occur separately.
 - 2. Growth and development occur at the same rate across all children.
 - 3. Development refers to physical changes, while growth refers to mental and emotional changes.
 - 4. Growth refers only to physical changes, while development refers to mental and emotional changes.

Question ID : 441009331026
 Option 1 ID : 4410091290615
 Option 2 ID : 4410091290616
 Option 3 ID : 4410091290617
 Option 4 ID : 4410091290614

Q.2 What is one key benefit of multilingual education?

- Ans
- 1. Encourages rote learning
 - 2. Promotes cultural uniformity
 - 3. Reduces learning time
 - 4. Fosters linguistic diversity

Question ID : 441009327737
 Option 1 ID : 4410091277405
 Option 2 ID : 4410091277403
 Option 3 ID : 4410091277404
 Option 4 ID : 4410091277402

Q.3 Which of the following is essential when analysing subject content in relation to teaching objectives?

- Ans
- 1. Aligning content with curriculum standards
 - 2. Focusing only on theoretical knowledge
 - 3. Using one method of instruction for all students
 - 4. Ignoring student interest

Question ID : 441009330992
 Option 1 ID : 4410091290483
 Option 2 ID : 4410091290484
 Option 3 ID : 4410091290485
 Option 4 ID : 4410091290482

Q.4 Which of the following is the most crucial consideration when selecting learning resources for an inclusive classroom?

- Ans
- 1. The resource's appeal to the majority group in the class
 - 2. The teacher's familiarity with the resource
 - 3. The cost of the resource
 - 4. The resource's ability to meet diverse learning needs and abilities

Question ID : 441009331015
 Option 1 ID : 4410091290570
 Option 2 ID : 4410091290573
 Option 3 ID : 4410091290572
 Option 4 ID : 4410091290571

Q.5 Which of the following is NOT a focus area to promote gender sensitivity in schools?

- Ans
- 1. Breaking gender stereotypes in the school environment
 - 2. Teacher attitudes and training
 - 3. Punishing students for gender nonconformity
 - 4. Curriculum and reading material

Question ID : 441009343548
 Option 1 ID : 4410091340185
 Option 2 ID : 4410091340183
 Option 3 ID : 4410091340184
 Option 4 ID : 4410091340182

Q.6 Apart from evaluating student learning outcomes, evaluation also helps in:

- Ans
- 1. reducing homework load
 - 2. identifying strengths and weaknesses of objectives and learning experiences
 - 3. increasing school funding
 - 4. preparing lesson plans

Question ID : 441009343575
 Option 1 ID : 4410091340292
 Option 2 ID : 4410091340291
 Option 3 ID : 4410091340293
 Option 4 ID : 4410091340290

Q.7 What is the main difference between 'theatre' and 'drama'?

- Ans
- 1. Theatre refers to a play performance for an audience, while drama refers to the exploration of subjects through acting.
 - 2. Theatre is only a form of entertainment, while drama is always educational.
 - 3. Drama is only performed on stage, while theatre is performed on screen.
 - 4. There is no difference between the two terms.

Question ID : 441009327816
 Option 1 ID : 4410091277725
 Option 2 ID : 4410091277722
 Option 3 ID : 4410091277724
 Option 4 ID : 4410091277723

Test

Prime

By Adda247

Previous Year Papers PDF

PRACTICE MORE, SCORE HIGHER!



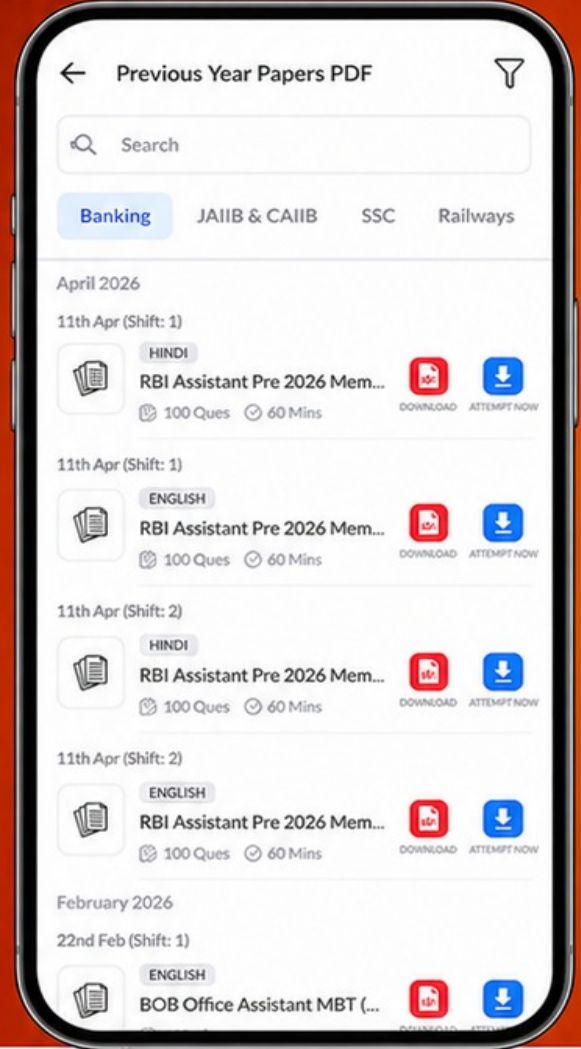
Free
25,000+
PDF's

High-Quality | Exam-Wise | Updated Regularly

ATTEMPT AS
MOCK



Turn PDFs into real exam experience.
Analyze. Improve. Succeed.



Topic-wise &
Exam-wise PDFs



Download &
Study Offline



Attempt as Mock
& Track Score



Smart Analysis
& Performance

AVAILABLE IN



Banking



SSC



Railway



Teaching



UGC



Agriculture



Nursing



Bihar



UP



Punjab



WB



Odisha



TN



AP & Telangana



Haryana



DOWNLOAD THE APP



Q.8 Which discipline of knowledge focuses on human behaviour and society?

- Ans 1. Sociology
 2. Chemistry
 3. Biology
 4. Geometry

Question ID : 441009330931
Option 1 ID : 4410091290231
Option 2 ID : 4410091290232
Option 3 ID : 4410091290230
Option 4 ID : 4410091290233

Q.9 Which of the following is a key principle in creating an inclusive school for children with special needs?

- Ans 1. Keeping children with special needs in separate classrooms
 2. Focusing on academic achievement alone
 3. Fostering an environment where all students learn together
 4. Providing special services only outside of school hours

Q.10 Which of the following theoretical perspectives best supports inclusive education by emphasising the role of social interaction in cognitive development?

- Ans 1. Information Processing Theory
 2. Behaviourism
 3. Constructivism
 4. Social Constructivism

Question ID : 441009328585
Option 1 ID : 4410091280805
Option 2 ID : 4410091280802
Option 3 ID : 4410091280803
Option 4 ID : 4410091280804