

Delhi
Forest Guard
3 March 2021
Shift 3

**Test
Prime**

By Adda247

ALL EXAMS, ONE SUBSCRIPTION



Test. Analyze. Improve. Repeat.



Don't just *prepare*. Perform.

Test Prime — built only for mock tests.



1,50,000+
Mock Tests



25,000+
Previous Year Papers



800+
Exam Covered



500% Refund
on Selection



5 lakh+
Free Quizzes



Daily
Free PDFs



Job Alerts
Stay Updated

- Multilingual
- Detailed Solution
- Strong and Weak Areas



**All India
Rankings**

Compete with lakhs.
Rank. Improve. Repeat.



← Adda247 test prime

Rating ▾

Editors' choice

New



Adda247 Test Prime
Adda Education • Education
Installed



DOWNLOAD THE APP



Forest Department



Participant ID:	
Participant Name:	
Test Center Name:	
Test Date:	03/03/2021
Test Time:	4:30 PM - 6:30 PM
Subject:	Forest Guard

Section : General Intelligence and Reasoning Ability

Q.1 Rahul and Ravi started from the same place, Rahul went towards west and Ravi went towards North. Now, in what direction Rahul is to Ravi?

- Ans
- 1. south-west
 - 2. north-east
 - 3. south-east
 - 4. north-west

Question ID : 59445929837
Status : Answered
Chosen Option : 1

Q.2 In certain code language:

'A Skunk sat on a stump' coded as 'af de de am ar ak'.
'And think the stump stunk' coded as 'af ve ah ab ad'.
' But the stump think the skunk stunk' coded as 'ah ve af ve ad ak ab'.

What is the code for 'skunk' ?

- Ans
- 1. am
 - 2. ad
 - 3. ab
 - 4. ak

Question ID : 59445929815
Status : Not Answered
Chosen Option : --

Q.3 In certain code language TURKEY is coded as UVSLFZ, then what is SWEDEN coded as?

- Ans
- 1. TXFEFO
 - 2. TEXFFO
 - 3. NOPEYF
 - 4. OFEFXT

Question ID : 59445929813
Status : Answered
Chosen Option : 1

Q.4 Arrange the given words in the sequence in which they occur in the dictionary.

1. Telepathize
2. Telepathy
3. Telepherique
4. Telepheme
5. Telepathic

- Ans
- 1. 4,3,1,2,5
 - 2. 1,2,3,4,5
 - 3. 5,1,2,4,3
 - 4. 1,5,3,2,4

Question ID : 59445929805
Status : Answered
Chosen Option : 2

Q.5 A man went towards the south and covered 10 km to reach the Supermarket from his house. Then he turned east and covered 5km to reach the pharmacy. Then he turned North and covered 5 km to reach the Juice shop. Finally he turned west and covered 5 km to return back to his house. In which direction is he from his house?

- Ans
- 1. north
 - 2. south
 - 3. west
 - 4. east

Question ID : 59445929836
Status : Answered
Chosen Option : 2

Q.6 Find the missing number in the following number series.

320, 323, 328, 335, ____

- Ans
- 1. 324
 - 2. 345
 - 3. 344
 - 4. 294

Question ID : 59445929831
Status : Answered
Chosen Option : 3

Q.7 Which two signs should be interchanged to make the below equation mathematically correct?

$$10 - 8 \times 2 \div 4 + 6 = 0$$

- Ans
- 1. $\times, -$
 - 2. \times, \div
 - 3. $\div, -$
 - 4. $\times, +$

Question ID : 59445929826
Status : Answered
Chosen Option : 2

Q.8 सुगन्या की ओर इशारा करते हुए, विजय ने अपनी पत्नी श्रुति से कहा, "वह मेरी माता की बहू है।"
सुगन्या, विजय से कैसे संबंधित है?

- Ans
- 1. चाची/मौसी/मामी/ताई/बुआ
 - 2. भाभी/साली
 - 3. बहन
 - 4. चचेरा भाई/ममेरा भाई/फुफेरा भाई/मौसेरा भाई

Question ID : 59445929817
Status : Answered
Chosen Option : 2

Q.9 Out of the given options, three are similar in a certain manner. However, one option is NOT like the other three. Select the option which is different from the rest.

- Ans
- 1.
 - 2.
 - 3.
 - 4.

Question ID : 59445929841
Status : Answered
Chosen Option : 2

Q.10 यदि V, L और M की माता है। O, V का बेटा नहीं है। M, O की मौसी है। V, E की पत्नी है। L और M बहनें हैं। E, O से कैसे संबंधित है?

- Ans
- 1. चाचा/मामा/ताऊ/मौसा/फूफा
 - 2. बेटा
 - 3. भाई
 - 4. पोता/नाती

Question ID : 59445929818
Status : Answered
Chosen Option : 1

Q.11 Which two signs should be interchanged to make the below equation mathematically correct?

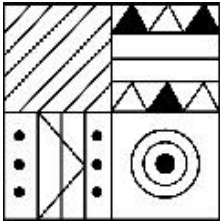
$$16 \times 96 + 3 - 45 \div 9 = 299$$

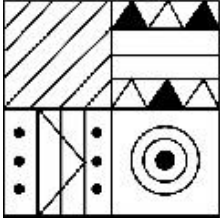
- Ans
- 1. $\times, +$
 - 2. $\times, -$
 - 3. $\times, +$
 - 4. $\div, -$

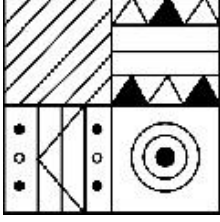
Question ID : 59445929828
Status : Answered
Chosen Option : 3

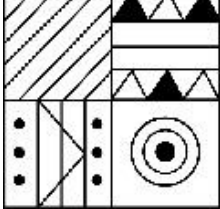
Q.12 Out of the given options, three are similar in a certain manner. However, one option is NOT like the other three. Select the option which is different from the rest.

Ans

✗ 1. 

✗ 2. 

✓ 3. 

✗ 4. 

Question ID : 59445929842
 Status : Answered
 Chosen Option : 3

Q.13 Find the missing number in the following number series.

33, __, 77, 99, 121

- Ans
- ✓ 1. 55
 - ✗ 2. 22
 - ✗ 3. 66
 - ✗ 4. 44

Question ID : 59445929830
 Status : Answered
 Chosen Option : 1

Q.14 Out of the given options, three are similar in a certain manner. However, one option is NOT like the other three. Select the option which is different from the rest.

- Ans
- 1. The Moon
 - 2. soccer ball
 - 3. world globe
 - 4. Starfish

Question ID : 59445929808
Status : Answered
Chosen Option : 4

Q.15 In a certain code language ZINNIA = 73 , DAISY = 58, then what is the code for JASMINE ?

- Ans
- 1. 75
 - 2. 69
 - 3. 57
 - 4. 71

Question ID : 59445929814
Status : Answered
Chosen Option : 4

Q.16 The age of sumitha 15 years later will be 4 times her age 3 years back. What is the present age of sumitha ?

- Ans
- 1. 6
 - 2. 3
 - 3. 4
 - 4. 9

Question ID : 59445929833
Status : Answered
Chosen Option : 4

Q.17 Which two signs should be interchanged to make the equation given below mathematically correct?

$$0.01 - 0.02 \times 0.04 + 0.06 \div 0.03 = 0.07$$

- Ans
- 1. x,+
 - 2. ÷,-
 - 3. x,+
 - 4. x,-

Question ID : 59445929829
Status : Not Answered
Chosen Option : --

Q.18 Select the option that is related to the third term on the same basis as the second term is related to the first term.

Badminton : shuttlecock :: Snooker : ?

- Ans
- 1. Billiard ball
 - 2. volleyball
 - 3. baseball
 - 4. golf ball

Question ID : 59445929812
Status : Answered
Chosen Option : 3

Q.19 Four years ago, Sneha's age was one-third of the age, she will be in 6 years. How old is she now?

- Ans
- 1. 9 years
 - 2. 6 years
 - 3. 8 years
 - 4. 13 years

Question ID : 59445929835
Status : Answered
Chosen Option : 1

Q.20 Complete the following number series:

121, 110, 120, 111, ____

- Ans
- 1. 130
 - 2. 121
 - 3. 114
 - 4. 119

Question ID : 59445929821
Status : Answered
Chosen Option : 2

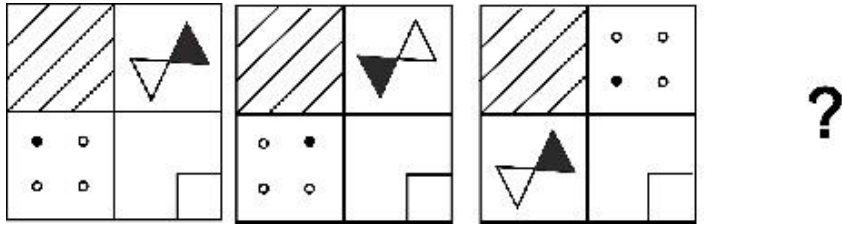
Q.21 Find the missing number in the following number series.

144, 156, 169, 183, ____

- Ans
- 1. 118
 - 2. 198
 - 3. 186
 - 4. 129

Question ID : 59445929832
Status : Answered
Chosen Option : 2

Q.22 Which of the following answer figure completes the series of the question figure?



Ans

- ✓ 1.
- ✗ 2.
- ✗ 3.
- ✗ 4.

Question ID : 59445929840
Status : Answered
Chosen Option : 1

Q.23 Select the option that is related to the third number on the same basis as the second number is related to the first number.

8 : 64 :: 7 : ?

- ✓ 1. 49
- ✗ 2. 94
- ✗ 3. 54
- ✗ 4. 38

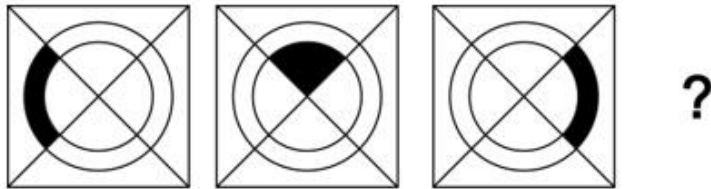
Question ID : 59445929823
Status : Answered
Chosen Option : 1

Q.24 Out of the given options, three are similar in a certain manner. However, one option is NOT like the other three. Select the option which is different from the rest.

- Ans
- 1. CDE
 - 2. GHI
 - 3. STU
 - 4. FED

Question ID : 59445929807
 Status : Answered
 Chosen Option : 4

Q.25 Which of the following answer figure completes the series of the question figure?



Ans

- 1.
- 2.
- 3.
- 4.

Question ID : 59445929839
 Status : Answered
 Chosen Option : 4

Q.26 Find the missing term in the following letter series:

ABC, ____, DEF, UVW

- Ans 1. XYZ
 2. LMN
 3. HIJ
 4. OPQ

Question ID : 59445929804
 Status : Answered
 Chosen Option : 1

Q.27 Complete the following number series:

145, 122, 101, 82, ____

- Ans 1. 65
 2. 60
 3. 82
 4. 96

Question ID : 59445929822
 Status : Answered
 Chosen Option : 1

Q.28 Complete the following number series:

32, 64, 96, 128, ____

- Ans 1. 120
 2. 100
 3. 98
 4. 160

Question ID : 59445929819
 Status : Answered
 Chosen Option : 4

Q.29 A is 12 m east of B. F is 5 m north of A. H lies to the west of B at the same distance as A is in the east. I is 5 m north of H. What is the distance between I and F?

- Ans 1. 25 m
 2. 24 m
 3. 12 m
 4. 21 m

Question ID : 59445929838
 Status : Answered
 Chosen Option : 2

Q.30 कुमार की ओर इशारा करते हुए, केजिया ने अपनी दोस्त मारा से कहा, "वह मेरे नाना के एकलौते पुत्र हैं।" कुमार, केजिया से कैसे संबंधित हैं?

- Ans
- 1. बेटा
 - 2. भाई
 - 3. दादा/नाना
 - 4. मामा

Question ID : 59445929816
Status : Answered
Chosen Option : 4

Q.31 Select the option that is related to the third term on the same basis as the second term is related to the first term.

OMK : ECA :: YVS : ?

- Ans
- 1. YXW
 - 2. OMK
 - 3. PMJ
 - 4. DGJ

Question ID : 59445929810
Status : Not Answered
Chosen Option : --

Q.32 Which two signs should be interchanged to make the below equation mathematically correct?

$$56 - 14 + 42 \div 5 \times 10 = 63$$

- Ans
- 1. $\div, +$
 - 2. $\div, -$
 - 3. \times, \div
 - 4. $\times, +$

Question ID : 59445929827
Status : Answered
Chosen Option : 3

Q.33 Arrange the given words in the sequence in which they occur in the dictionary.

1. Mesquinerie
2. Mesothoraces
3. Messigneurs
4. Mesoscaphe
5. Messaline

- Ans
- 1. 1,5,3,2,4
 - 2. 3,5,1,2,4
 - 3. 4,2,1,5,3
 - 4. 4,1,2,3,5

Question ID : 59445929806
Status : Answered
Chosen Option : 3

Q.34 Out of the given options, three are similar in a certain manner. However, one option is NOT like the other three. Select the option which is different from the rest.

- Ans 1. Bullock cart
 2. Bull Dozer
 3. Loader
 4. Excavator

Question ID : 59445929809
 Status : Answered
 Chosen Option : 1

Q.35 Select the option that is related to the third number on the same basis as the second number is related to the first number.

225 : 15 :: 361 : ?

- Ans 1. 15
 2. 12
 3. 17
 4. 19

Question ID : 59445929824
 Status : Answered
 Chosen Option : 4

Q.36 Select the option that is related to the third term on the same basis as the second term is related to the first term.

Sweater : Socks :: Raincoat : ?

- Ans 1. cap
 2. umbrella
 3. jeans
 4. sunglasses

Question ID : 59445929811
 Status : Answered
 Chosen Option : 1

Q.37 Find the missing term in the following letter series:

ONM, LKJ, ____, FED

- Ans 1. PQR
 2. ABC
 3. IHG
 4. CBA

Question ID : 59445929803
 Status : Answered
 Chosen Option : 3

Q.38 Complete the following number series:

37, 50, 65, 82, _____

- Ans 1. 101
 2. 96
 3. 88
 4. 48

Question ID : 59445929820
Status : Answered
Chosen Option : 1

Q.39 If P weighs is 3 kg more than Q who is thrice as weight as R. If the total weights of P,Q and R be 227 kg then what is the weight of Q?

- Ans 1. 97 kg
 2. 96 kg
 3. 76 kg
 4. 69 kg

Question ID : 59445929834
Status : Answered
Chosen Option : 2

Q.40 Select the option that is related to the third number on the same basis as the second number is related to the first number.

13: 143 :: 5 : ?

- Ans 1. 42
 2. 56
 3. 55
 4. 43

Question ID : 59445929825
Status : Not Answered
Chosen Option : --

Section : General Awareness

Q.1 On February 26, 2020, the _____ Government formally notified the United Nations that it will withdraw from the UNHRC (United Nations Human Rights Council) resolution.

- Ans 1. Pakistani
 2. Chinese
 3. Indian
 4. Sri Lankan

Question ID : 59445929850
Status : Answered
Chosen Option : 1

Q.2 Raksha Bandhan is celebrated in the Hindu month of _____.

- Ans
- 1. Sravana
 - 2. Ashwin
 - 3. Kartik
 - 4. Purnima

Question ID : 59445929864
Status : Answered
Chosen Option : 1

Q.3 India's first e-waste clinic was inaugurated in _____.

- Ans
- 1. West Bengal
 - 2. Andhra Pradesh
 - 3. Tamil Nadu
 - 4. Madhya Pradesh

Question ID : 59445929845
Status : Not Answered
Chosen Option : --

Q.4 Which among the following factor does not lead to a shift in the demand curve?

- Ans
- 1. Income
 - 2. Advertisement
 - 3. Price of related products
 - 4. Price of the product

Question ID : 59445929874
Status : Answered
Chosen Option : 2

Q.5 The World Social Justice Day is celebrated on February _____ every year.

- Ans
- 1. 21
 - 2. 23
 - 3. 22
 - 4. 20

Question ID : 59445929849
Status : Answered
Chosen Option : 4

Q.6 Who among the following built the Brihadishvara Temple of Tamil Nadu?

- Ans 1. Rajaraja Chola I
 2. Virarajendra Chola
 3. Rajendra Chola I
 4. Rajadhiraja Chola

Question ID : 59445929854
Status : Answered
Chosen Option : 3

Q.7 Which among the following market has only one buyer for a particular goods or service?

- Ans 1. Monopoly
 2. Monopolistic
 3. Monopsony
 4. Oligopoly

Question ID : 59445929871
Status : Answered
Chosen Option : 1

Q.8 The build-up of _____ which is known as 'Greenhouse Effect' in the atmosphere is leading to current global warming.

- Ans 1. chlorine
 2. sulphur dioxide
 3. fluorine
 4. carbon dioxide

Question ID : 59445929843
Status : Answered
Chosen Option : 4

Q.9 _____ is the most abundant element in Earth's crust.

- Ans 1. Silicon
 2. Nitrogen
 3. Oxygen
 4. Iron

Question ID : 59445929875
Status : Answered
Chosen Option : 3

Q.10 Who among the following won the Australian Open 2020 Men's Singles?

- Ans
- 1. Rafael Nadal
 - 2. Roger Federer
 - 3. Novak Djokovic
 - 4. Dominic Thiem

Question ID : 59445929862
Status : Answered
Chosen Option : 3

Q.11 When was the Battle of Buxar fought?

- Ans
- 1. 1764
 - 2. 1786
 - 3. 1782
 - 4. 1760

Question ID : 59445929851
Status : Answered
Chosen Option : 1

Q.12 _____ is expressed as ratio of charge to potential difference.

- Ans
- 1. Electrical Capacitance
 - 2. Resistance
 - 3. Flux density
 - 4. Inductance

Question ID : 59445929878
Status : Marked For Review
Chosen Option : 2

Q.13 Which among the following Constitutional Amendment reduced the voting age from 21 years to 18 years for the Lok Sabha and state legislative assembly elections?

- Ans
- 1. 63rd
 - 2. 42nd
 - 3. 56th
 - 4. 61st

Question ID : 59445929857
Status : Answered
Chosen Option : 4

Q.14 The _____ range are continued eastwards as the Bharner and Kaimur hills.

- Ans
- 1. Western Ghats
 - 2. Satpura
 - 3. Vindhyas
 - 4. Aravalli

Question ID : 59445929869
Status : Not Answered
Chosen Option : --

Q.15 In July 2020, the Government of India established the Central Consumer Protection Authority under the Consumer Protection Act, _____.

- Ans
- 1. 2020
 - 2. 2018
 - 3. 2015
 - 4. 2019

Question ID : 59445929847
Status : Answered
Chosen Option : 3

Q.16 Market Stabilisation Scheme, instrument for monetary management, was introduced in _____.

- Ans
- 1. 2006
 - 2. 2004
 - 3. 2008
 - 4. 2001

Question ID : 59445929872
Status : Not Answered
Chosen Option : --

Q.17 APEC stands for _____.

- Ans
- 1. Association Pacific Economic Cooperation
 - 2. Association Pacific Economic Community
 - 3. Asia-Pacific Economic Cooperation
 - 4. Asia-Pacific Economic Community

Question ID : 59445929880
Status : Answered
Chosen Option : 3

Q.18 Which among the following Part of the Indian Constitution deals with the Directive Principles of State Policy?

- Ans
- 1. V
 - 2. IV
 - 3. VI
 - 4. III

Question ID : 59445929858
Status : **Marked For Review**
Chosen Option : 2

Q.19 The headquarters of International Monetary Fund (IMF) is located at _____.

- Ans
- 1. Geneva
 - 2. London
 - 3. Paris
 - 4. Washington D.C.

Question ID : 59445929879
Status : **Answered**
Chosen Option : 4

Q.20 Where was the first T20I Men's Cricket World Cup held?

- Ans
- 1. New Zealand
 - 2. South Africa
 - 3. Australia
 - 4. India

Question ID : 59445929860
Status : **Not Answered**
Chosen Option : --

Q.21 When was the Citizenship Act passed in India?

- Ans
- 1. 1955
 - 2. 1962
 - 3. 1967
 - 4. 1958

Question ID : 59445929856
Status : **Answered**
Chosen Option : 1

Q.22 Dalkhai dance of Odisha is usually performed to please Goddess _____.

- Ans
- 1. Laxmi
 - 2. Radha
 - 3. Saraswati
 - 4. Durga

Question ID : 59445929865
Status : Not Answered
Chosen Option : --

Q.23 Which among the following language was not included in the Eighth Schedule by 71st Constitutional Amendment?

- Ans
- 1. Manipuri
 - 2. Nepali
 - 3. Bodo
 - 4. Konkani

Question ID : 59445929855
Status : Answered
Chosen Option : 2

Q.24 When was the United Nations Children's Fund (UNICEF) formed?

- Ans
- 1. 1952
 - 2. 1946
 - 3. 1943
 - 4. 1958

Question ID : 59445929881
Status : Answered
Chosen Option : 2

Q.25 When was the First Battle of Tarain fought?

- Ans
- 1. 1191
 - 2. 1215
 - 3. 1192
 - 4. 1194

Question ID : 59445929853
Status : Answered
Chosen Option : 1

Q.26 Which Yojana was previously known as Swavalamban Yojana?

- Ans
- 1. Pradhan Mantri Jeevan Jyoti Bima Yojana
 - 2. Atal Pension Yojana
 - 3. Pradhan Mantri Suraksha Bima Yojana
 - 4. Pradhan Mantri Awas Yojana

Question ID : 59445929873
Status : Not Answered
Chosen Option : --

Q.27 ISRO developed an application called _____ which allows users to explore a 2D/3D representation of the surface of the Earth.

- Ans
- 1. Bhumi
 - 2. Bharat
 - 3. Bhraman
 - 4. Bhuvan

Question ID : 59445929876
Status : Answered
Chosen Option : 1

Q.28 _____ has become the first airport in India to become free of single-use plastics.

- Ans
- 1. Netaji Subhash Chandra Bose International Airport
 - 2. Chennai International Airport
 - 3. Chhatrapati Shivaji Maharaj International Airport Mumbai
 - 4. Delhi Indira Gandhi International Airport Limited

Question ID : 59445929846
Status : Answered
Chosen Option : 4

Q.29 Who among the following is the chairman of Telecom Regulatory Authority of India (TRAI) as of December 2020?

- Ans
- 1. Raman Roy
 - 2. Gurdeep Singh
 - 3. Harsh Kumar Bhanwala
 - 4. P D Vaghela

Question ID : 59445929882
Status : Answered
Chosen Option : 1

Q.30 _____ is the longest tributary of River Narmada.

- Ans
- 1. Dudhi
 - 2. Tawa
 - 3. Kolar
 - 4. Hiran

Question ID : 59445929867
Status : Answered
Chosen Option : 2

Q.31 Who among the following tennis player announced retirement in February 2020?

- Ans
- 1. Sania Mirza
 - 2. Serena Williams
 - 3. Venus Williams
 - 4. Maria Sharapova

Question ID : 59445929861
Status : Not Answered
Chosen Option : --

Q.32 Who among the following footballer holds the record for the highest number of goals in a calendar year till February 2020?

- Ans
- 1. Lionel Messi
 - 2. Wayne Rooney
 - 3. Gareth Bale
 - 4. Cristiano Ronaldo

Question ID : 59445929859
Status : Answered
Chosen Option : 4

Q.33 When was the Disaster Management Act passed?

- Ans
- 1. 2001
 - 2. 2003
 - 3. 2007
 - 4. 2005

Question ID : 59445929844
Status : Not Answered
Chosen Option : --

Q.34 _____ soil is rich in surface accumulation of organic matter.

- Ans
- 1. Alluvial
 - 2. Red
 - 3. Peat
 - 4. Arid

Question ID : 59445929870
Status : Answered
Chosen Option : 1

Q.35 As of January 2021, Jawed Ashraf is the Ambassador of India to _____.

- Ans
- 1. Russia
 - 2. France
 - 3. China
 - 4. United States of America

Question ID : 59445929848
Status : Not Answered
Chosen Option : --

Q.36 The ancient name of _____ river was Sadanira.

- Ans
- 1. Ghaghara
 - 2. Gandak
 - 3. Betwa
 - 4. Kosi

Question ID : 59445929868
Status : Not Answered
Chosen Option : --

Q.37 The _____ Law of Thermodynamics states that it is impossible to create a thermodynamic process that is perfectly efficient.

- Ans
- 1. Third
 - 2. Second
 - 3. First
 - 4. Zeroeth

Question ID : 59445929877
Status : Answered
Chosen Option : 4

Q.38 Who among the following defeated the Afghans in the Battle of Ghaghra?

- Ans
- 1. Jahangir
 - 2. Babur
 - 3. Aurangzeb
 - 4. Akbar

Question ID : 59445929852
Status : Answered
Chosen Option : 2

Q.39 Chakri is one of the most important folk music of the _____ state/union territory.

- Ans
- 1. Himachal Pradesh
 - 2. West Bengal
 - 3. Jammu and Kashmir
 - 4. Maharashtra

Question ID : 59445929863
Status : Answered
Chosen Option : 1

Q.40 _____ is also known as Rani Ki Baoli in the local language.

- Ans
- 1. Neemrana Baori
 - 2. Ranipur Jharia
 - 3. Jaigarh Fort
 - 4. Elephanta Cave

Question ID : 59445929866
Status : Not Answered
Chosen Option : --

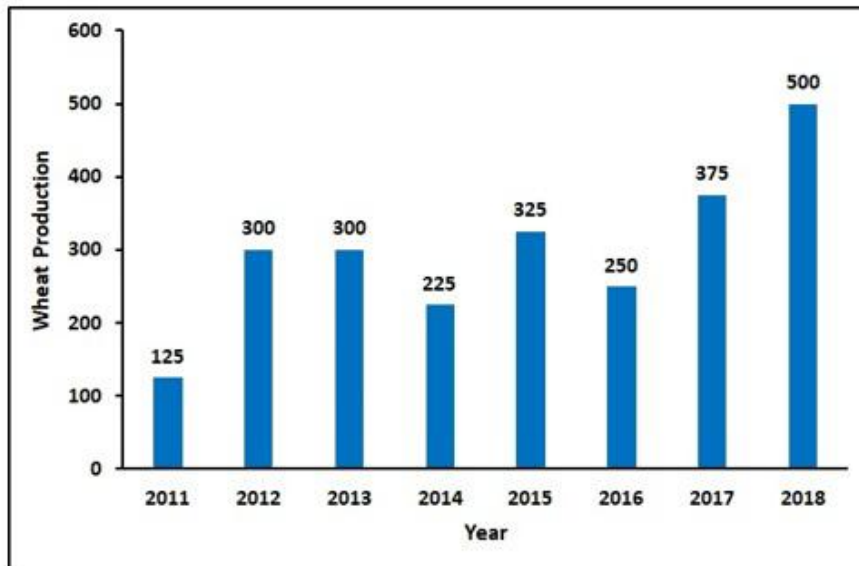
Section : Arithmetical and Numerical Ability

Q.1 At 25% discount, profit% was 25%, at 10% discount, profit% will be _____%.
Assume marked price and selling price remains same.

- Ans
- 1. 50
 - 2. 30
 - 3. 60
 - 4. 40

Question ID : 59445929904
Status : Not Answered
Chosen Option : --

Q.2 The graph shows the wheat production in tonnes in various years by a country. What was highest increase in production in a year from a previous year?



- Ans
- 1. 100 percent
 - 2. 140 percent
 - 3. 50 percent
 - 4. 75 percent

Question ID : 59445929922
 Status : Answered
 Chosen Option : 2

Q.3 X took a loan of Rs 16000 with simple interest for as many years as the rate of interest. If he paid Rs 4840 as interest at the end of the period, what was the rate of the interest?

- Ans
- 1. 5.5 percent
 - 2. 6.0 percent
 - 3. 5.0 percent
 - 4. 6.5 percent

Question ID : 59445929907
 Status : Answered
 Chosen Option : 1

Q.4 Find the value of: $\frac{72}{8} \times \frac{63}{7} \div 3 \times \frac{16}{2^4}$

- Ans
- 1. 27
 - 2. 54
 - 3. 18
 - 4. 36

Question ID : 59445929887
 Status : Answered
 Chosen Option : 1

Q.5 The salaries of X, Y and Z are in the ratio of 10:12:15. They are awarded increments of 40%, 50% and 60% respectively. What is the new ratio of their salaries?

- Ans
- 1. 7:9:14
 - 2. 7:9:12
 - 3. 7:10:12
 - 4. 8:9:12

Question ID : 59445929897
Status : Answered
Chosen Option : 2

Q.6 The HCF of 2 numbers is 32 and the other 2 factors of their LCM is 8 and 13 respectively. Find the difference between the numbers.

- Ans
- 1. 160
 - 2. 80
 - 3. 120
 - 4. 240

Question ID : 59445929891
Status : Not Answered
Chosen Option : --

Q.7 What decimal of a day is a minute?

- Ans
- 1. 0.000778
 - 2. 0.000727
 - 3. 0.000694
 - 4. 0.000667

Question ID : 59445929888
Status : Not Answered
Chosen Option : --

Q.8 In a party, the average age of all the guests is 25 years. The average age of all the male guests is 29 years and the average age of all the female guests is 21 years. What is the percentage of the male guests present in the party?

- Ans
- 1. 25 percent
 - 2. 50 percent
 - 3. 45 percent
 - 4. 30 percent

Question ID : 59445929902
Status : Not Answered
Chosen Option : --

Q.9 What is the least multiple of 12 which leaves a remainder of 6 when divided by 8, 15, 20 and 28?

- Ans
- 1. 1686
 - 2. 426
 - 3. 846
 - 4. 636

Question ID : 59445929894
Status : Not Answered
Chosen Option : --

Q.10 4 bells begin tolling together at the intervals of 20, 25, 30 and 40 seconds respectively. How many times do they toll together in an hour?

- Ans
- 1. 5
 - 2. 7
 - 3. 6
 - 4. 4

Question ID : 59445929892
Status : Not Answered
Chosen Option : --

Q.11 160 multiplied by the square of a number gives the cube of 8 times the number. Find the number.

- Ans
- 1. 0.375
 - 2. 0.25
 - 3. 0.5
 - 4. 0.3125

Question ID : 59445929884
Status : Answered
Chosen Option : 4

Q.12 What is the value of $0.420420420\dots - 0.240240240\dots$?

- Ans
- 1. $\frac{40}{111}$
 - 2. $\frac{15}{111}$
 - 3. $\frac{24}{111}$
 - 4. $\frac{20}{111}$

Question ID : 59445929890
Status : Not Answered
Chosen Option : --

Q.13 A gift item was marked up twice by 25% each. It was sold for Rs 1200 after a discount of 20%. Find the cost price.

- Ans
- 1. Rs 900
 - 2. Rs 960
 - 3. Rs 1020
 - 4. Rs 1050

Question ID : 59445929901
Status : Answered
Chosen Option : 2

Q.14 What is the result when 0.051051051.. is converted into a fraction?

- Ans
- 1. 17/999
 - 2. 17/111
 - 3. 17/666
 - 4. 17/333

Question ID : 59445929889
Status : Not Answered
Chosen Option : --

Q.15 A man walked along the hypotenuse across a right-triangle plot. The other two sides measured 30 m and 25 m respectively. Approximately how much distance saved by not walking along the sides? (in m)

- Ans
- 1. 20
 - 2. 16
 - 3. 12
 - 4. 14

Question ID : 59445929914
Status : Not Answered
Chosen Option : --

Q.16 60 items were bought for Rs 72 and 24 of those items were sold for RS 36. What is the profit percent on the items sold?

- Ans
- 1. 40 percent
 - 2. 50 percent
 - 3. 20 percent
 - 4. 25 percent

Question ID : 59445929906
Status : Not Answered
Chosen Option : --

Q.17 A man goes on a solo journey of 450 kms. He covers the first 300 at the speeds of 60 kmph and the remaining distance at 37.50 kmph. Find the average speed of the journey.

- Ans
- 1. 60 kmph
 - 2. 50 kmph
 - 3. 40 kmph
 - 4. 80 kmph

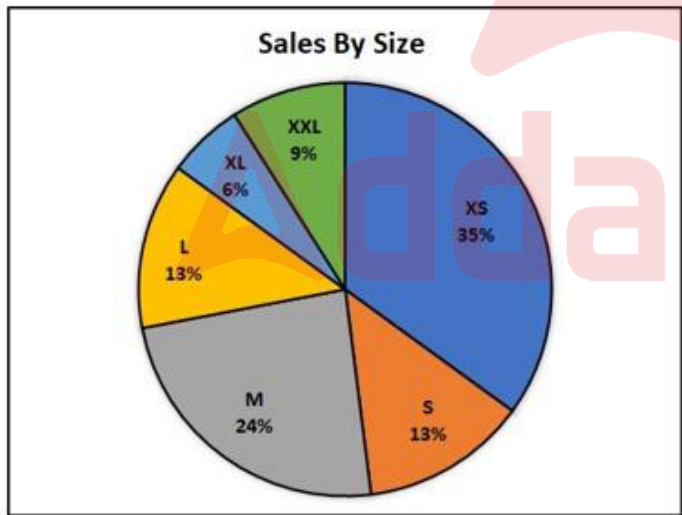
Question ID : 59445929917
 Status : Answered
 Chosen Option : 2

Q.18 In a bag, there are coins of 25 paise, 50 paise and Rs 1 in the ratio of 8:4:1. In there is Rs 30 in total, how many 50 paise coins are there?

- Ans
- 1. 48
 - 2. 6
 - 3. 12
 - 4. 24

Question ID : 59445929898
 Status : Not Answered
 Chosen Option : --

Q.19 The pie chart shows the shirts' proportion of sizes sold by a shop in a year. If the total number of shirts sold was 20000, then by how much does the highest selling 2 sizes differ from the least selling 2 sizes?



- Ans
- 1. 8400
 - 2. 8800
 - 3. 9600
 - 4. 9200

Question ID : 59445929921
 Status : Not Answered
 Chosen Option : --

Q.20 Find the sum of digits of the largest 5-digit number divisible by 11.

- Ans
- 1. 45
 - 2. 36
 - 3. 27
 - 4. 18

Question ID : 59445929886
Status : Answered
Chosen Option : 2

Q.21 A, B and C can do a job in 30, 40 and 48 days respectively. In how many days can A do the work if he is assisted by B and C every third day?

- Ans
- 1. 21
 - 2. 20.57
 - 3. 21.14
 - 4. 20.14

Question ID : 59445929918
Status : Not Answered
Chosen Option : --

Q.22 X invests an amount of Rs 10,000 for 2 years at 20% compound interest compounded half-yearly. How much interest will he earn after a year?

- Ans
- 1. Rs 2,100
 - 2. Rs 4,641
 - 3. Rs 3,310
 - 4. Rs 4,410

Question ID : 59445929910
Status : Answered
Chosen Option : 2

Q.23 If Rs 1120 is to be divided into 3 proportions of $4/5:5/4:3/4$, then how much is second proportion worth?

- Ans
- 1. Rs 300
 - 2. Rs 400
 - 3. Rs 320
 - 4. Rs 500

Question ID : 59445929896
Status : Answered
Chosen Option : 4

Q.24 A man travelled a distance of 120 kms in 12 hours. He travelled partly on foot at 8 kmph and partly on a scooty at 11 kmph. Find the time travelled in hours on foot.

- Ans
- 1. 4
 - 2. 3
 - 3. 5
 - 4. 6

Question ID : 59445929915
Status : Not Answered
Chosen Option : --

Q.25 एक सब्जी विक्रेता को अपनी लागत मूल्य पर 25% का लाभ मिलने की उम्मीद है। यदि एक सप्ताह में उसने 1500 रुपए की सब्जियां बेचीं, तो उसका लाभ क्या है?

- Ans
- 1. 100 रुपए
 - 2. 400 रुपए
 - 3. 200 रुपए
 - 4. 300 रुपए

Question ID : 59445929903
Status : Answered
Chosen Option : 4

Q.26 A student was incorrectly marked 0 in 2 questions of 5 marks each. He would have scored 4 in both of them. If the total marks on the paper was 50, then what will be the increase in the percentage of the student?

- Ans
- 1. 17 percent
 - 2. 18 percent
 - 3. 20 percent
 - 4. 16 percent

Question ID : 59445929899
Status : Not Answered
Chosen Option : --

Q.27 A and B can together finish a work in 30 days. After working for 24 days, B left the work and A took 8 days to finish the work. In how many days can A alone finish the work?

- Ans
- 1. 32
 - 2. 40
 - 3. 30
 - 4. 35

Question ID : 59445929916
Status : Not Answered
Chosen Option : --

Q.28 What is the percentage increase in the area of a right angled triangle if one of its base is increased by 30 percent and the height is decreased by 20 percent ?

- Ans
- 1. 6 percent
 - 2. 5 percent
 - 3. 7 percent
 - 4. 4 percent

Question ID : 59445929912
Status : Not Answered
Chosen Option : --

Q.29 A number is 60% greater than a number and another number is 20% less than the same number. What is the ratio of the 2 numbers?

- Ans
- 1. 5:3
 - 2. 17:8
 - 3. 15:8
 - 4. 2:1

Question ID : 59445929895
Status : Not Answered
Chosen Option : --

Q.30 A principal invested at simple interest amounts to by 300% in 10 years. What will be the compound interest of Rs 50,000 after 2 years at the same rate?

- Ans
- 1. Rs 22,000
 - 2. Rs 20,000
 - 3. Rs 21,600
 - 4. Rs 26,400

Question ID : 59445929909
Status : Not Answered
Chosen Option : --

Q.31 A seller sells 2 articles, one of them for Rs 1200 at 20% profit and another one for Rs 1350 at 10% loss. Find the overall gain percent.

- Ans
- 1. 2 percent
 - 2. 1 percent
 - 3. 4 percent
 - 4. 3 percent

Question ID : 59445929905
Status : Answered
Chosen Option : 1

Q.32 What is the minimum number that should be subtracted from the sum of squares of 13 and 14, such that the resulting number is a perfect square?

- Ans
- 1. 20
 - 2. 14
 - 3. 4
 - 4. 9

Question ID : 59445929883
 Status : Not Answered
 Chosen Option : --

Q.33 The average weight of A, B and C is 72 kg. If the average weight of A and B is 78 kg and the average weight of A and C is 71 kg, then what is the weight of A? (in kg)

- Ans
- 1. 83
 - 2. 82
 - 3. 81
 - 4. 80

Question ID : 59445929900
 Status : Not Answered
 Chosen Option : --

Q.34 The table shows the number of units produced of an item by 3 companies in various years. In which of the given years, was the average production by the companies same?

Year	Company A	Company B	Company C
2014	440	400	360
2015	400	520	300
2016	450	430	520
2017	420	330	450
2018	500	580	500

- Ans
- 1. 2015 and 2017
 - 2. 2014 and 2017
 - 3. 2014 and 2016
 - 4. 2014 and 2018

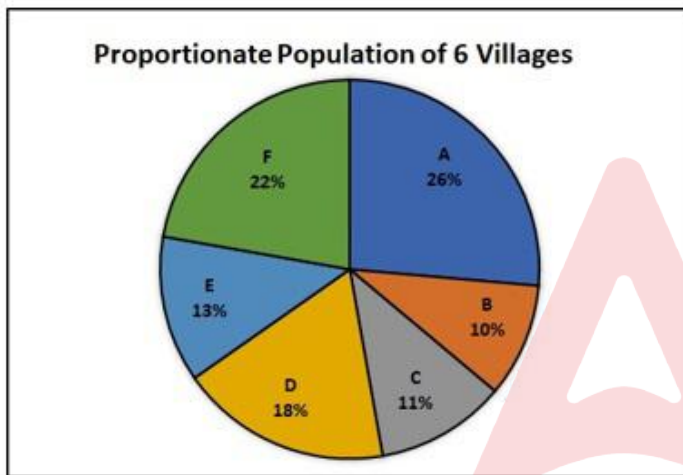
Question ID : 59445929920
 Status : Not Answered
 Chosen Option : --

Q.35 Two sides of the parallelogram are 15 cm and 20 cm. If the altitude corresponding to the side of the length 15 cm is 4 cm, then what is the altitude to the side of the length 20cm?

- Ans
- 1. 4 cm
 - 2. 5 cm
 - 3. 3 cm
 - 4. 6 cm

Question ID : 59445929913
 Status : Not Answered
 Chosen Option : --

Q.36 The pie chart shows the proportionate population of 6 villages in a district. If the total population of the district is 15000, then how much population stays in villages A and F?



- Ans
- 1. 7500
 - 2. 7000
 - 3. 7200
 - 4. 8000

Question ID : 59445929919
 Status : Not Answered
 Chosen Option : --

Q.37 The diagonal of a floor of a rectangular pool is 25 feet. The longer side of the pool is 20 feet. What is the area of the pool? (in sq. feet)

- Ans
- 1. 250
 - 2. 225
 - 3. 300
 - 4. 500

Question ID : 59445929911
 Status : Not Answered
 Chosen Option : --

Q.38 An amount receives a simple interest of 80% in 10 years. What will be the compound interest on the same amount of Rs 10000 after 2 years?

- Ans
- 1. Rs 2,100
 - 2. Rs 1,664
 - 3. Rs 2,016
 - 4. Rs 3,328

Question ID : 59445929908
 Status : Not Answered
 Chosen Option : --

Q.39 Find the quotient when the smallest 3-digit number divisible by 15 is divided by 7.

- Ans
- 1. 14
 - 2. 15
 - 3. 17
 - 4. 16

Question ID : 59445929885
 Status : Not Answered
 Chosen Option : --

Q.40 What is the biggest 4 digit number divisible by 25, 40, 45 and 75?

- Ans
- 1. 9900
 - 2. 9960
 - 3. 9000
 - 4. 9600

Question ID : 59445929893
 Status : Not Answered
 Chosen Option : --

Section : English Language and Comprehension

Q.1 Fill in with the blank with the correct Part of Speech

He is all that is said about him _____ much more.

- Ans
- 1. rather
 - 2. but
 - 3. and
 - 4. if

Question ID : 59445929927
 Status : Answered
 Chosen Option : 3

Q.2 The sentence below has been divided into three parts. Select the part of the sentence that has an error. If the sentence has no error, select the option 'No Error'.

Even with substantial evidence/ and testimony form the witnesses/ the accused was acquitted.

- Ans
- 1. the accused was acquitted.
 - 2. Even with substantial evidence
 - 3. and testimony form the witnesses
 - 4. No error

Question ID : 59445929926
Status : Answered
Chosen Option : 2

Q.3 A sentence has been given in Active/Passive voice. Out of the four alternatives suggested, select the one which best expresses the same sentence in Passive/Active voice.

The country is known for its geographical diversity but it also offers a great dynamic cultural diversity.

- Ans
- 1. The country has been known for its geographical diversity but it also offers a great dynamic cultural diversity.
 - 2. We all knew the country for its geographical diversity but it also offers a great dynamic cultural diversity
 - 3. We all know the country for its geographical diversity but it also offers a great dynamic cultural diversity
 - 4. We have all known the country for its geographical diversity but it also offers a great dynamic cultural diversity

Question ID : 59445929957
Status : Not Answered
Chosen Option : --

Q.4 Fill in with the blanks with the correct Part of Speech

Half of the syllabus _____ until now, the remaining we can expect _____ by next month.

- Ans
- 1. is completed/ to be completed
 - 2. completed/ will have been completed
 - 3. has been completed/ will complete
 - 4. has been completed/ to be completed

Question ID : 59445929930
Status : Answered
Chosen Option : 1

Q.5 Four words are given, out of which only one word is spelt correctly. Choose the correctly spelt word.

- Ans
- 1. Exaggarate
 - 2. Exeggerate
 - 3. Exaggerate
 - 4. Exagerrate

Question ID : 59445929946
Status : Answered
Chosen Option : 1

Q.6 Four words are given, out of which only one word is spelt correctly. Choose the correctly spelt word.

- Ans
- 1. Abcence
 - 2. Abscence
 - 3. Absance
 - 4. Absence

Question ID : 59445929943
Status : Answered
Chosen Option : 4

Q.7 Select the most appropriate 'one word ' for the expressions given below.

Take or claim something without justification.

- Ans
- 1. Cynicism
 - 2. Arrogate
 - 3. Indolent
 - 4. Paltry

Question ID : 59445929934
Status : Answered
Chosen Option : 1

Q.8 Four words are given, out of which only one word is spelt correctly. Choose the correctly spelt word.

- Ans
- 1. Alacrety
 - 2. Alacrity
 - 3. Alarity
 - 4. Alecrity

Question ID : 59445929944
Status : Answered
Chosen Option : 2

Q.9 Select the most appropriate meaning of the given idiom

A penny saved is a penny earned

- Ans
- 1. What you have is worth more than what you might have later
 - 2. Better to show than tell
 - 3. Money you save today you can spend later
 - 4. Saving money for later

Question ID : 59445929949
Status : Answered
Chosen Option : 3

Q.10 Select the word that is closest in meaning (SYNONYM) to the word given below.

Saunter

- Ans
- 1. Allure
 - 2. Control
 - 3. Constitute
 - 4. Stroll

Question ID : 59445929935
Status : Answered
Chosen Option : 4

Q.11 The sentence below has been divided into three parts. Select the part of the sentence that has an error. If the sentence has no error, select the option 'No Error'.

The confectioneries drew/ him towards them like a/ flame draws a moth.

- Ans
- 1. flame draws a moth.
 - 2. No error
 - 3. him towards them like a
 - 4. The confectioneries drew

Question ID : 59445929924
Status : Not Answered
Chosen Option : --

Q.12 Select the word that is opposite in meaning (ANTONYM) to the word given below.

Yearn

- Ans
- 1. Crave
 - 2. Loathe
 - 3. Restrict
 - 4. Covet

Question ID : 59445929941
Status : Answered
Chosen Option : 2

Q.13 Fill in with the blank with the correct Part of Speech

It is not _____ a lifetime; there is still much to live for.

- Ans
- 1. yet
 - 2. just
 - 3. still
 - 4. over

Question ID : 59445929928
Status : Answered
Chosen Option : 2

Q.14 A sentence has been given in Active/Passive voice. Out of the four alternatives suggested, select the one which best expresses the same sentence in Passive/Active voice.

I will be partaking in the next presidential elections.

- Ans
- 1. The next presidential elections would be being partaken in by me.
 - 2. The next presidential elections will have been partaken in by me.
 - 3. The next presidential elections will be being partaken in by me.
 - 4. The next presidential elections will be partaken in by me.

Question ID : 59445929956
Status : Answered
Chosen Option : 3

Q.15 Select the most appropriate meaning of the given idiom

Birds of a feather flock together

- Ans
- 1. Comparing two things that cannot be compared
 - 2. People with differences can also unite under something common
 - 3. Believe what people do and not what they say
 - 4. People who are alike are often friends

Question ID : 59445929952
Status : Answered
Chosen Option : 2

Q.16 Select the most appropriate meaning of the given idiom

The best thing since sliced bread

- Ans
- 1. Don't take it too seriously
 - 2. A really good invention
 - 3. Put a project on hold
 - 4. You can't have everything

Question ID : 59445929953
Status : Answered
Chosen Option : 2

Q.17 Select the most appropriate meaning of the given idiom

Wrap your head around something

- Ans 1. Understand something complicated
 2. Make a problem worse
 3. Let's not talk about that problem right now
 4. My patience has run out

Question ID : 59445929951
Status : Marked For Review
Chosen Option : 1

Q.18 Select the word that is opposite in meaning (ANTONYM) to the word given below.

Petrify

- Ans 1. Secrete
 2. Dismay
 3. Tranquilize
 4. Astound

Question ID : 59445929942
Status : Answered
Chosen Option : 3

Q.19 Select the word that is closest in meaning (SYNONYM) to the word given below.

Utilitarian

- Ans 1. Pragmatic
 2. Enigmatic
 3. Militant
 4. Decorative

Question ID : 59445929936
Status : Not Answered
Chosen Option : --

Q.20 The sentence below has been divided into three parts. Select the part of the sentence that has an error. If the sentence has no error, select the option 'No Error'.

The correction facility/ seemed awfully suspicious/ when we first visited them.

- Ans 1. No error
 2. The correction facility
 3. seemed awfully suspicious
 4. when we first visited them.

Question ID : 59445929923
Status : Answered
Chosen Option : 3

Q.21 Four words are given, out of which only one word is spelt correctly. Choose the correctly spelt word.

- Ans 1. Guarantee
 2. Guarenty
 3. Gurantee
 4. Garantee

Question ID : 59445929947
Status : Answered
Chosen Option : 1

Q.22 A sentence has been given in Active/Passive voice. Out of the four alternatives suggested, select the one which best expresses the same sentence in Passive/Active voice.

The government has to take necessary precautions against this new virus to protect people from getting infected.

- Ans 1. Necessary precautions are being taken by the government against this new virus to protect the people from getting infected.
 2. Necessary precautions should have been taken by the government against this new virus to protect the people from getting infected.
 3. Necessary precautions have been taken by the government against this new virus to protect the people from getting infected.
 4. Necessary precautions have to be taken by the government against this new virus to protect people from getting infected.

Question ID : 59445929955
Status : Answered
Chosen Option : 4

Q.23 Select the most appropriate 'one word' for the expressions given below.

Pose or present a danger/threat to.

- Ans 1. Irascible
 2. Knotty
 3. Jeopardise
 4. Bolster

Question ID : 59445929933
Status : Answered
Chosen Option : 3

Q.24 Select the most appropriate meaning of the given idiom

Miss the boat

- Ans 1. Tell something briefly
 2. Missing something dearly
 3. It's too late
 4. To get upset

Question ID : 59445929950
Status : Answered
Chosen Option : 3

Q.25 A sentence has been given in Active/Passive voice. Out of the four alternatives suggested, select the one which best expresses the same sentence in Passive/Active voice.

The students are made to stand up for the National anthem by the rules of school policy.

- Ans
- 1. The school policy dictates the students to stand-up for the National Anthem.
 - 2. The school rules have made the students stand up for the National Anthem.
 - 3. The school rules makes the students stand up for the National Anthem.
 - 4. By the rules of school policy, students are made to sand up for the National Anthem.

Question ID : 59445929954
Status : Answered
Chosen Option : 4

Q.26 Select the word that is closest in meaning (SYNONYM) to the word given below.

Vacuous

- Ans
- 1. Vacant
 - 2. Vagary
 - 3. Intelligent
 - 4. Expressive

Question ID : 59445929937
Status : Answered
Chosen Option : 1

Q.27 Select the most appropriate meaning of the given idiom

Throw caution to the wind

- Ans
- 1. Take a risk
 - 2. Everything, all the way.
 - 3. It's your decision
 - 4. Nothing is entirely free

Question ID : 59445929948
Status : Answered
Chosen Option : 1

Q.28 Select the word that is opposite in meaning (ANTONYM) to the word given below.

Vilify

- Ans
- 1. Commend
 - 2. Disparage
 - 3. Nullify
 - 4. Fertile

Question ID : 59445929940
Status : Answered
Chosen Option : 1

Q.29 Four words are given, out of which only one word is spelt correctly. Choose the correctly spelt word.

- Ans 1. Criticize
 2. Critisaise
 3. Crietize
 4. Criticice

Question ID : 59445929945
Status : Answered
Chosen Option : 1

Q.30 Select the word that is closest in meaning (SYNONYM) to the word given below.

Welter

- Ans 1. Stern
 2. Confusion
 3. Bashing
 4. Soft

Question ID : 59445929938
Status : Answered
Chosen Option : 2

Q.31 Fill in with the blanks with the correct Part of Speech

I could have done so much with my life, but _____ I wasted several years
_____ trying to get this worthless piece of paper.

- Ans 1. than/to
 2. instead/of
 3. besides/to
 4. than/by

Question ID : 59445929929
Status : Answered
Chosen Option : 3

Q.32 Select the most appropriate 'one word ' for the expressions given below.

Greatly dismay or horrify.

- Ans 1. Enthral
 2. Appal
 3. Efficacy
 4. Choleric

Question ID : 59445929932
Status : Answered
Chosen Option : 2

Q.33 The sentence below has been divided into three parts. Select the part of the sentence that has an error. If the sentence has no error, select the option 'No Error'.

It was other worldly experience,/ having seen him perform live in/ front of such a huge crowd.

- Ans
- 1. front of such a huge crowd.
 - 2. It was other worldly experience,
 - 3. having seen him perform live in
 - 4. No error

Question ID : 59445929925
Status : Answered
Chosen Option : 3

Q.34 Select the word that is opposite in meaning (ANTONYM) to the word given below.

Appellation

- Ans
- 1. Designation
 - 2. Secret
 - 3. Anonymously
 - 4. Denomination

Question ID : 59445929939
Status : Answered
Chosen Option : 1

Q.35 Select the most appropriate 'one word ' for the expressions given below.

Reduce the force, effect, or value of.

- Ans
- 1. Attenuate
 - 2. Anathema
 - 3. Avarice
 - 4. Anarchy

Question ID : 59445929931
Status : Answered
Chosen Option : 1

Comprehension:

Read the passage carefully and choose the best answer to each question out of the four alternatives.

The Cyclopes, according to mythology, were a race of bad-tempered and rather stupid one-eyed giants. Not perhaps, a great portent for new generation of robots. But Andrew Davidson, a computer scientist at Imperial College, London, thinks one eye is enough for a robot, provided its brain can think fast enough. For a robot to work autonomously, it has to understand its environment. Stereoscopic vision, integrating the images from two 'eyes' looking at the same thing from different angles, is one approach to achieve this, but it involves a lot of complicated computer processing. The preferred method these days, therefore, is Simultaneous Localisation and Mapping (SLAM), which uses sensors such as laser-based range finders that 'see' by bouncing beams of light off their surroundings and timing the return.

Dr. Davidson, however, wants to replace the range finders, which are expensive and fiddly, with a digital camera, which is small, cheap and well-understood. With this in mind, he is developing ways to use a single, moving video camera to create continually updated 3D maps that can guide even the most hyperactive of robots for explorations. His technique involves collecting and integrating images taken from different angles as the camera goes on its travel. The trick is to manage to do it in real time, at frame rates of 100- 1000 per second.

SubQuestion No : 36

Q.36 Which characteristic of the cyclopes was being inferred with the design of new generation robots?

- Ans
- 1. their height
 - 2. their ill tempered
 - 3. their intelligence
 - 4. their eye

Question ID : 59445929961
Status : Answered
Chosen Option : 2

Comprehension:

Read the passage carefully and choose the best answer to each question out of the four alternatives.

The Cyclopes, according to mythology, were a race of bad-tempered and rather stupid one-eyed giants. Not perhaps, a great portent for new generation of robots. But Andrew Davidson, a computer scientist at Imperial College, London, thinks one eye is enough for a robot, provided its brain can think fast enough. For a robot to work autonomously, it has to understand its environment. Stereoscopic vision, integrating the images from two 'eyes' looking at the same thing from different angles, is one approach to achieve this, but it involves a lot of complicated computer processing. The preferred method these days, therefore, is Simultaneous Localisation and Mapping (SLAM), which uses sensors such as laser-based range finders that 'see' by bouncing beams of light off their surroundings and timing the return.

Dr. Davidson, however, wants to replace the range finders, which are expensive and fiddly, with a digital camera, which is small, cheap and well-understood. With this in mind, he is developing ways to use a single, moving video camera to create continually updated 3D maps that can guide even the most hyperactive of robots for explorations. His technique involves collecting and integrating images taken from different angles as the camera goes on its travel. The trick is to manage to do it in real time, at frame rates of 100- 1000 per second.

SubQuestion No : 37

Q.37 According to the passage which of the following the statement is untrue?

- Ans** 1. The Cyclopes, according to mythology, were a race of bad-tempered and rather stupid one-eyed giants.
2. The preferred method these days, therefore, is Simultaneous Localisation and Mapping (SLAM), which uses sensors such as laser-based range finders that 'see' by bouncing beams of light off their surroundings and timing the return.
3. Dr. Davidson, however, wants to replace the range finders, which are expensive and fiddly, with a digital camera, which is small, cheap and well-understood.
4. Dr. Davidson, a computer scientist at Imperial College, France, thinks one eye is enough for a robot, provided its brain can think fast enough.

Question ID : 59445929963

Status : Answered

Chosen Option : 4

Comprehension:

Read the passage carefully and choose the best answer to each question out of the four alternatives.

The Cyclopes, according to mythology, were a race of bad-tempered and rather stupid one-eyed giants. Not perhaps, a great portent for new generation of robots. But Andrew Davidson, a computer scientist at Imperial College, London, thinks one eye is enough for a robot, provided its brain can think fast enough. For a robot to work autonomously, it has to understand its environment. Stereoscopic vision, integrating the images from two 'eyes' looking at the same thing from different angles, is one approach to achieve this, but it involves a lot of complicated computer processing. The preferred method these days, therefore, is Simultaneous Localisation and Mapping (SLAM), which uses sensors such as laser-based range finders that 'see' by bouncing beams of light off their surroundings and timing the return.

Dr. Davidson, however, wants to replace the range finders, which are expensive and fiddly, with a digital camera, which is small, cheap and well-understood. With this in mind, he is developing ways to use a single, moving video camera to create continually updated 3D maps that can guide even the most hyperactive of robots for explorations. His technique involves collecting and integrating images taken from different angles as the camera goes on its travel. The trick is to manage to do it in real time, at frame rates of 100- 1000 per second.

SubQuestion No : 38

Q.38 Why does Andrew Davidson wants to replace range finders?

Ans 1. because they are expensive and fiddly

2. because they are complex machines to work with.

3. because they are well understood

4. because they are small and cheap

Question ID : 59445929960

Status : Answered

Chosen Option : 1

Comprehension:

Read the passage carefully and choose the best answer to each question out of the four alternatives.

The Cyclopes, according to mythology, were a race of bad-tempered and rather stupid one-eyed giants. Not perhaps, a great portent for new generation of robots. But Andrew Davidson, a computer scientist at Imperial College, London, thinks one eye is enough for a robot, provided its brain can think fast enough. For a robot to work autonomously, it has to understand its environment. Stereoscopic vision, integrating the images from two 'eyes' looking at the same thing from different angles, is one approach to achieve this, but it involves a lot of complicated computer processing. The preferred method these days, therefore, is Simultaneous Localisation and Mapping (SLAM), which uses sensors such as laser-based range finders that 'see' by bouncing beams of light off their surroundings and timing the return.

Dr. Davidson, however, wants to replace the range finders, which are expensive and fiddly, with a digital camera, which is small, cheap and well-understood. With this in mind, he is developing ways to use a single, moving video camera to create continually updated 3D maps that can guide even the most hyperactive of robots for explorations. His technique involves collecting and integrating images taken from different angles as the camera goes on its travel. The trick is to manage to do it in real time, at frame rates of 100- 1000 per second.

SubQuestion No : 39

Q.39 Which element is listed in the passage which a robot needs to understand to function autonomously?

- Ans
- 1. two-eyes
 - 2. SLAM
 - 3. environment
 - 4. stronger computing capacity

Question ID : 59445929962
Status : Answered
Chosen Option : 3

Comprehension:

Read the passage carefully and choose the best answer to each question out of the four alternatives.

The Cyclopes, according to mythology, were a race of bad-tempered and rather stupid one-eyed giants. Not perhaps, a great portent for new generation of robots. But Andrew Davidson, a computer scientist at Imperial College, London, thinks one eye is enough for a robot, provided its brain can think fast enough. For a robot to work autonomously, it has to understand its environment. Stereoscopic vision, integrating the images from two 'eyes' looking at the same thing from different angles, is one approach to achieve this, but it involves a lot of complicated computer processing. The preferred method these days, therefore, is Simultaneous Localisation and Mapping (SLAM), which uses sensors such as laser-based range finders that 'see' by bouncing beams of light off their surroundings and timing the return.

Dr. Davidson, however, wants to replace the range finders, which are expensive and fiddly, with a digital camera, which is small, cheap and well-understood. With this in mind, he is developing ways to use a single, moving video camera to create continually updated 3D maps that can guide even the most hyperactive of robots for explorations. His technique involves collecting and integrating images taken from different angles as the camera goes on its travel. The trick is to manage to do it in real time, at frame rates of 100- 1000 per second.

SubQuestion No : 40

Q.40 According to the passage which of the following is not a characteristic of a Cyclopes?

- Ans 1. ill-tempered
 2. intelligent
 3. one-eyed
 4. giant

Question ID : 59445929959

Status : Answered

Chosen Option : 2

Section : Hindi Language and Comprehension

Q.1 निम्नलिखित प्रश्न में, चार विकल्पों में से, उस विकल्प का चयन करें जो दिए गए वाक्य के काल का सही विकल्प हो।

कलाकार ने अभिनय किया होगा।

- Ans 1. आसन्न भूतकाल
 2. संदिग्ध भूतकाल
 3. सामान्य वर्तमानकाल
 4. हेतुहेतु मद भूतकाल

Question ID : 59445929987

Status : Answered

Chosen Option : 2

Q.2 निम्नलिखित प्रश्न में, चार विकल्पों में से, उस सही विकल्प का चयन करें जो दिए गए शब्द-युग्म के अर्थ का सही विकल्प हो।

कृशानु और कृषाण

- Ans 1. आग और किसान
 2. कमर और किसान
 3. तीक्ष्ण और किसान
 4. आग और कैंकड़ा

Question ID : 59445929981
 Status : Not Answered
 Chosen Option : --

Q.3 निम्नलिखित प्रश्न में, चार विकल्पों में से, उस विकल्प का चयन करें जो दिए गए मुहावरे का सही अर्थ वाला विकल्प है।

विस्मित होना

- Ans 1. धोखा खाना
 2. सम्मान करना
 3. बेसुध होना
 4. आश्चर्य चकित होना

Question ID : 59445929995
 Status : Answered
 Chosen Option : 4

Q.4 निम्नलिखित प्रश्न में, चार विकल्पों में से, उस सही विकल्प का चयन करें जो वाक्यांशों के लिए एक शब्द का विकल्प हो।

दूसरों के पीछे चलने वाला

- Ans 1. अनुचर
 2. सरस
 3. हितैषी
 4. उदंड

Question ID : 59445929982
 Status : Answered
 Chosen Option : 1

Q.5 निम्नलिखित प्रश्न में, चार विकल्पों में से, उस विकल्प का चयन करें जो दी गई लोकोक्ति का सही अर्थ वाला विकल्प है।

ईश्वर की माया, कहीं धूप कहीं छाया

- Ans 1. अपराधी निरपराध को डांटे
 2. हर तरफ विपत्ति होना
 3. संसार में सभी एक जैसे नहीं होते
 4. लेने का देना

Question ID : 59445929997
 Status : Answered
 Chosen Option : 3

Q.6 निम्नलिखित प्रश्न में, चार विकल्पों में से, उस विकल्प का चयन करें जो सही वाक्य भेद का विकल्प हो।

मैं जानता हूँ कि तुम्हारे अक्षर अच्छे नहीं बनते।

- Ans
- 1. निषेधवाचक वाक्य
 - 2. संयुक्त वाक्य
 - 3. सरल वाक्य
 - 4. मिश्र वाक्य

Question ID : 59445929990
Status : Answered
Chosen Option : 1

Q.7 निम्नलिखित प्रश्न में, चार विकल्पों में से, उस विकल्प का चयन करें जो दिए गए शब्द का तत्सम रूप हो।

हीरा

- Ans
- 1. हारि
 - 2. हरीतकी
 - 3. हीरक
 - 4. हरित

Question ID : 59445929969
Status : Answered
Chosen Option : 3

Q.8 निम्नलिखित प्रश्न में, चार विकल्पों में से, उस विकल्प का चयन करें जो दिए गए शब्द का तद्भव रूप हो।

शालाकिका

- Ans
- 1. सौ
 - 2. सावन
 - 3. सलाई
 - 4. सीख

Question ID : 59445929970
Status : Answered
Chosen Option : 3

Q.9 निम्नलिखित चार विकल्पों में से, उस विकल्प का चयन करें जो प्रत्यय से बने शब्द का सही विकल्प हो।

- Ans
- 1. निराकरण
 - 2. दुर्लभ
 - 3. खजानची
 - 4. पर्यावरण

Question ID : 59445929968
Status : Answered
Chosen Option : 4

Q.10 निम्नलिखित प्रश्न में, चार विकल्पों में से, उस विकल्प का चयन करें जो दिए गए शब्द का सही स्त्रीलिंग रूप वाला विकल्प है।

परोपकारी

- Ans 1. परोपकर्त्री
 2. परउपकारिन
 3. परोपकारिनी
 4. परोपकारी

Question ID : 59445929984

Status : Answered

Chosen Option : 3

Q.11 निम्नलिखित प्रश्न में, चार विकल्पों में से, उस विकल्प का चयन करें जो दिए गए शब्द के समानार्थी शब्द का विकल्प नहीं है।

साँप

- Ans 1. उरग
 2. अरि
 3. ब्याल
 4. पवनासन

Question ID : 59445929980

Status : Answered

Chosen Option : 2

Q.12 निम्नलिखित प्रश्न में, चार विकल्पों में से, उस विकल्प का चयन करें जो दिए गए वाक्य के लिए अव्यय के भेद का सही विकल्प हो।

वे लोग रात को पहुंचे।

- Ans 1. विस्मयादिबोधक अव्यय
 2. समुच्चयबोधक अव्यय
 3. क्रियाविशेषण अव्यय
 4. संबंधबोधक अव्यय

Question ID : 59445929972

Status : Answered

Chosen Option : 2

Q.13 निम्नलिखित प्रश्न में, चार विकल्पों में से, उस विकल्प का चयन करें जो सही वाक्य भेद का विकल्प हो।

आज मुझे बहुत काम है इसलिए मैं तुम्हारे पास नहीं आ सकूँगा।

- Ans 1. विस्मयादिवाचक वाक्य
 2. संयुक्त वाक्य
 3. मिश्र वाक्य
 4. संदेहवाचक वाक्य

Question ID : 59445929991

Status : Not Answered

Chosen Option : --

Q.14 निम्नलिखित चार विकल्पों में से, उस विकल्प का चयन करें जो विराम चिह्न युक्त वाक्य का सही विकल्प हो।

- Ans
- 1. तू चुप कर: जैसा कहा जाए वैसा ही कर?
 - 2. तू चुप कर... जैसा कहा जाए वैसा ही कर,
 - 3. तू चुप कर? जैसा कहा जाए वैसा ही कर।
 - 4. तू चुप कर। जैसा कहा जाए वैसा ही कर।

Question ID : 59445929994
Status : Answered
Chosen Option : 4

Q.15 निम्नलिखित प्रश्न में, चार विकल्पों में से, उस विकल्प का चयन करें जो दिए गए वाक्य के लिए वृत्ति के भेद का सबसे अच्छा विकल्प है।

अगर किताब मिल जाए, तो मैं पढाई कर लूँगा।

- Ans
- 1. विध्यर्थ
 - 2. निश्चयार्थ
 - 3. संदेहार्थ
 - 4. संकेतार्थ

Question ID : 59445929988
Status : Answered
Chosen Option : 4

Q.16 निम्नलिखित प्रश्न में, चार विकल्पों में से, उस विकल्प का चयन करें जो दी गई लोकोक्ति का सही अर्थ वाला विकल्प है।

खरी मजूरी चोखा काम -

- Ans
- 1. एक को देख के दूसरा बिगड़ना
 - 2. अच्छे बुरे सभी एक जगह
 - 3. मजदूरी के तुरंत बाद नकद पैसे मिलना
 - 4. बहुत कठिन परिश्रम का थोड़ा लाभ

Question ID : 59445929998
Status : Answered
Chosen Option : 3

Q.17 निम्नलिखित प्रश्न में, चार विकल्पों में से, उस विकल्प का चयन करें जो दिए गए सही संधि विच्छेद की संधि का सही विकल्प हो।

आत्मा + अवलंबन

- Ans
- 1. आत्मलंबन
 - 2. आत्मवलंबन
 - 3. अत्मावलंबन
 - 4. आत्मावलंबन

Question ID : 59445929964
Status : Answered
Chosen Option : 1

Q.18 निम्नलिखित प्रश्न में, चार विकल्पों में से, उस विकल्प का चयन करें जो विलोम शब्द का सबसे अच्छा विकल्प है।

अनाहृत

- Ans
- 1. उपरि
 - 2. तुकांत
 - 3. अत्यल्प
 - 4. आहृत

Question ID : 59445929975
Status : Answered
Chosen Option : 4

Q.19 निम्नलिखित प्रश्न में, चार विकल्पों में से, उस विकल्प का चयन करें जो दिए गए मुहावरे का सही अर्थ वाला विकल्प है।

प्राण निकलना

- Ans
- 1. अत्यंत मुश्किल
 - 2. अलग या दूर रहना
 - 3. अत्यंत भयभीत होना
 - 4. बुद्धि ठिकाने न रहना

Question ID : 59445929996
Status : Answered
Chosen Option : 1

Q.20 निम्नलिखित प्रश्न में, चार विकल्पों में से, उस विकल्प का चयन करें जो सही वाक्य भेद का विकल्प हो।

गीता खाना बना दी।

- Ans
- 1. निषेधवाचक वाक्य
 - 2. मिश्र वाक्य
 - 3. सरल वाक्य
 - 4. संयुक्त वाक्य

Question ID : 59445929992
Status : Not Answered
Chosen Option : --

Q.21 निम्नलिखित प्रश्न में, चार विकल्पों में से, उस सही विकल्प का चयन करें जो रिक्त स्थान के लिए उपयुक्त शब्द का सही विकल्प है।

_____ वर्षा होने पर चारों ओर बाढ़ आ गई।

- Ans
- 1. कम
 - 2. कभी-कभी
 - 3. लगातार
 - 4. रुक-रुक कर

Question ID : 59445929977
Status : Answered
Chosen Option : 3

Q.22 निम्नलिखित प्रश्न में, चार विकल्पों में से, उस सही विकल्प का चयन करें जो वाक्यांशों के लिए एक शब्द का विकल्प हो।

कम जानने वाला

- Ans 1. अनुपम
 2. अशक्त
 3. अल्पज्ञ
 4. अपठित

Question ID : 59445929983
 Status : Answered
 Chosen Option : 3

Q.23 निम्नलिखित चार विकल्पों में से, उस विकल्प का चयन करें जो शुद्ध शब्द का सही विकल्प है।

- Ans 1. अधीकारीनी
 2. अधिकरीनी
 3. अधीकरिणी
 4. अधिकारिणी

Question ID : 59445929979
 Status : Answered
 Chosen Option : 4

Q.24 निम्नलिखित प्रश्न में, चार विकल्पों में से, उस विकल्प का चयन करें जो दिए गए शब्द के सही संधि विच्छेद का विकल्प हो।

रहस्योद्घाटन

- Ans 1. रहस + उद्घाटन
 2. रहस्य +ओद्घटन
 3. रहस्यों + घाटन
 4. रहस्य + उद्घाटन

Question ID : 59445929965
 Status : Answered
 Chosen Option : 4

Q.25 निम्नलिखित प्रश्न में, चार विकल्पों में से, उस विकल्प का चयन करें जो क्रिया के भेद वाला सही विकल्प हो।

वे पढ़कर चले गए।

- Ans 1. पूर्वकालिक क्रिया
 2. प्रेरणार्थक क्रिया
 3. नामधातु क्रिया
 4. तात्कालिक क्रिया

Question ID : 59445929971
 Status : Answered
 Chosen Option : 1

Q.26 निम्नलिखित प्रश्न में, चार विकल्पों में से, उस विकल्प का चयन करें जो दिए गए शब्द के लिए सही द्विगु समास के विग्रह का विकल्प हो।

पंचतत्व

- Ans 1. पाँच तत्वों वाला
 2. पाँच है जिसके तत्व
 3. पाँच तत्वों का समूह
 4. पाँच तत्त्व

Question ID : 59445929966

Status : Not Answered

Chosen Option : --

Q.27 निम्नलिखित प्रश्न में, चार विकल्पों में से, उस विकल्प का चयन करें जो दिए गए शब्द के लिए बहुवचन शब्द का सबसे अच्छा विकल्प है।

राजा

- Ans 1. राजाएँ
 2. राजे
 3. राजवर्ग
 4. राजा

Question ID : 59445929985

Status : Not Answered

Chosen Option : --

Q.28 निम्नलिखित प्रश्न में, चार विकल्पों में से, उस सही विकल्प का चयन करें जो दिए गए शब्द के सही अर्थ का उचित विकल्प हो।

आकर

- Ans 1. आकृति
 2. भंडार
 3. शोभा
 4. अनाज

Question ID : 59445929976

Status : Not Answered

Chosen Option : --

Q.29 निम्नलिखित प्रश्न में, चार विकल्पों में से, उस विकल्प का चयन करें जो दिए गए शब्द के पर्यायवाची शब्द का सही विकल्प नहीं है।

अश्व

- Ans 1. वाजी
 2. दनुज
 3. हय
 4. सैधव

Question ID : 59445929973

Status : Not Answered

Chosen Option : --

Q.30 निम्नलिखित चार विकल्पों में से, उस विकल्प का चयन करें जो कोष्ठक में दिए गए शब्द के अनुसार उत्तम पुरुष वाचक सर्वनाम का सबसे अच्छा विकल्प है।

- Ans 1. (मुझको) बारिश में भीगना पसंद है।
 2. (आप) बाज़ार से सामान लेकर आओ।
 3. (आप) आज ठीक नहीं लग रहे।
 4. (उसका) सपना एकदिन पूरा होगा।

Question ID : 59445929986
 Status : Not Answered
 Chosen Option : --

Q.31 निम्नलिखित चार विकल्पों में से, उस विकल्प का चयन करें जो शुद्ध वाक्य का सबसे अच्छा विकल्प है।

- Ans 1. माता जी हर जगह अपनी ही चलाती हैं, दूसरों की ज़रा बिलकुल भी नहीं सुनती।
 2. माता जी हर जगह अपना ही चलाता है, दूसरों की ज़रा भी नहीं सुनती।
 3. माता जी हर सभी जगह अपनी ही चलाती हैं, दूसरों पर ज़रा भी नहीं सुनती।
 4. माता जी हर जगह अपनी ही चलाती हैं, दूसरों की ज़रा भी नहीं सुनती।

Question ID : 59445929993
 Status : Not Answered
 Chosen Option : --

Q.32 निम्नलिखित चार विकल्पों में से, उस विकल्प का चयन करें जो उपसर्ग से बने शब्द का सही विकल्प हो।

- Ans 1. लोहार
 2. अभ्यंतर
 3. समझदार
 4. देवत्व

Question ID : 59445929967
 Status : Not Answered
 Chosen Option : --

Q.33 निम्नलिखित प्रश्न में, चार विकल्पों में से, उस विकल्प का चयन करें जो विलोम शब्द का सबसे अच्छा विकल्प है।

आधार

- Ans 1. निराधार
 2. प्रदत्त
 3. विगत
 4. प्रदान

Question ID : 59445929974
 Status : Not Answered
 Chosen Option : --

Q.34 निम्नलिखित चार विकल्पों में से, उस विकल्प का चयन करें जो शुद्ध शब्द का सही विकल्प है।

- Ans 1. मुलायानकन
 2. मूल्यांकन
 3. मूलयांकन
 4. मुल्यांकन

Question ID : 59445929978
 Status : Not Answered
 Chosen Option : --

Q.35 निम्नलिखित प्रश्न में, चार विकल्पों में से, उस विकल्प का चयन करें जो दिए गए वाक्य के लिए पक्ष के भेद का सबसे अच्छा विकल्प है।

वह दिन-रात गड्ढा खोदता रहा तब जाकर उसमे से पानी निकला!

- Ans 1. प्रगतिद्योतक
 2. अभ्यासद्योतक
 3. सातप्यबोधक
 4. आरंभद्योतक

Question ID : 59445929989
 Status : Not Answered
 Chosen Option : --

Comprehension:

इस गद्यांश को ध्यानपूर्वक पढ़ें और चार विकल्पों में से प्रत्येक प्रश्न का सर्वोत्तम उत्तर चुनें।

मैं हैरान था कि यही दुबली-पतली गंगा, यही यमुना, यही सतलुज समतल मैदानों में उतरकर विशाल कैसे हो जाती हैं! इनका उछलना और कूदना, खिलखिलाकर लगातार हँसते जाना, इनकी यह भाव-भंगी, इनका यह उल्लास कहाँ गायब हो जाता है मैदान में जाकर? किसी लड़की को जब मैं देखता हूँ, किसी कली पर जब मेरा ध्यान अटक जाता है, तब भी इतना कौतूहल और विस्मय नहीं होता, जितना कि इन बेटियों की बाललीला देखकर! खेलते-खेलते जब ये जरा दूर निकल जाती हैं तो देवदार, चीड़, सरो, चिनार, सफेदा, कैल के जंगलों में पहुँचकर शायद इन्हें बीती बातें याद करने का मौका मिल जाता होगा। कौन जाने, बुड़ा हिमालय अपनी इन नटखट बेटियों के लिए कितना सिर धुनता होगा! बड़ी-बड़ी चोटियों से जाकर पूछिए तो उत्तर में विराट मौन के सिवाय उनके पास और रखा ही क्या है?

SubQuestion No : 36

Q.36 अनुच्छेद के अनुसार लेखक हैरान क्यों था?

- Ans 1. विभिन्न वृक्षों को देखकर
 2. नदियों का शांत रूप देखकर
 3. नदियों का मैदान में आते ही विशाल रूप देखकर
 4. पहाड़ों को देखकर

Question ID : 59445930000
 Status : Not Answered
 Chosen Option : --

Comprehension:

इस गद्यांश को ध्यानपूर्वक पढ़ें और चार विकल्पों में से प्रत्येक प्रश्न का सर्वोत्तम उत्तर चुनें।

मैं हैरान था कि यही दुबली-पतली गंगा, यही यमुना, यही सतलुज समतल मैदानों में उतरकर विशाल कैसे हो जाती हैं! इनका उछलना और कूदना, खिलखिलाकर लगातार हँसते जाना, इनकी यह भाव-भंगी, इनका यह उल्लास कहाँ गायब हो जाता है मैदान में जाकर? किसी लड़की को जब मैं देखता हूँ, किसी कली पर जब मेरा ध्यान अटक जाता है, तब भी इतना कौतूहल और विस्मय नहीं होता, जितना कि इन बेटियों की बाललीला देखकर! खेलते-खेलते जब ये जरा दूर निकल जाती हैं तो देवदार, चीड़, सरो, चिनार, सफेदा, कैल के जंगलों में पहुँचकर शायद इन्हें बीती बातें याद करने का मौका मिल जाता होगा। कौन जाने, बुड़ा हिमालय अपनी इन नटखट बेटियों के लिए कितना सिर धुनता होगा! बड़ी-बड़ी चोटियों से जाकर पूछिए तो उत्तर में विराट मौन के सिवाय उनके पास और रखा ही क्या है?

SubQuestion No : 37

Q.37 इनमें से कौन - सा विस्मय का पर्यायवाची नहीं है?

- Ans
- 1. आश्चर्य
 - 2. घटना
 - 3. ताज्जुब
 - 4. अचंभा

Question ID : 59445930003

Status : Not Answered

Chosen Option : --

Comprehension:

इस गद्यांश को ध्यानपूर्वक पढ़ें और चार विकल्पों में से प्रत्येक प्रश्न का सर्वोत्तम उत्तर चुनें।

मैं हैरान था कि यही दुबली-पतली गंगा, यही यमुना, यही सतलुज समतल मैदानों में उतरकर विशाल कैसे हो जाती हैं! इनका उछलना और कूदना, खिलखिलाकर लगातार हँसते जाना, इनकी यह भाव-भंगी, इनका यह उल्लास कहाँ गायब हो जाता है मैदान में जाकर? किसी लड़की को जब मैं देखता हूँ, किसी कली पर जब मेरा ध्यान अटक जाता है, तब भी इतना कौतूहल और विस्मय नहीं होता, जितना कि इन बेटियों की बाललीला देखकर! खेलते-खेलते जब ये जरा दूर निकल जाती हैं तो देवदार, चीड़, सरो, चिनार, सफेदा, कैल के जंगलों में पहुँचकर शायद इन्हें बीती बातें याद करने का मौका मिल जाता होगा। कौन जाने, बुड़ा हिमालय अपनी इन नटखट बेटियों के लिए कितना सिर धुनता होगा! बड़ी-बड़ी चोटियों से जाकर पूछिए तो उत्तर में विराट मौन के सिवाय उनके पास और रखा ही क्या है?

SubQuestion No : 38

Q.38 इस अनुच्छेद का कोई उपयुक्त शीर्षक:

- Ans
- 1. हिमालय की बेटियाँ
 - 2. बाललीला
 - 3. प्रकृति
 - 4. हिमालय पर्वत

Question ID : 59445930004

Status : Not Answered

Chosen Option : --

Test

Prime

By Adda247

Previous Year Papers PDF

PRACTICE MORE, SCORE HIGHER!



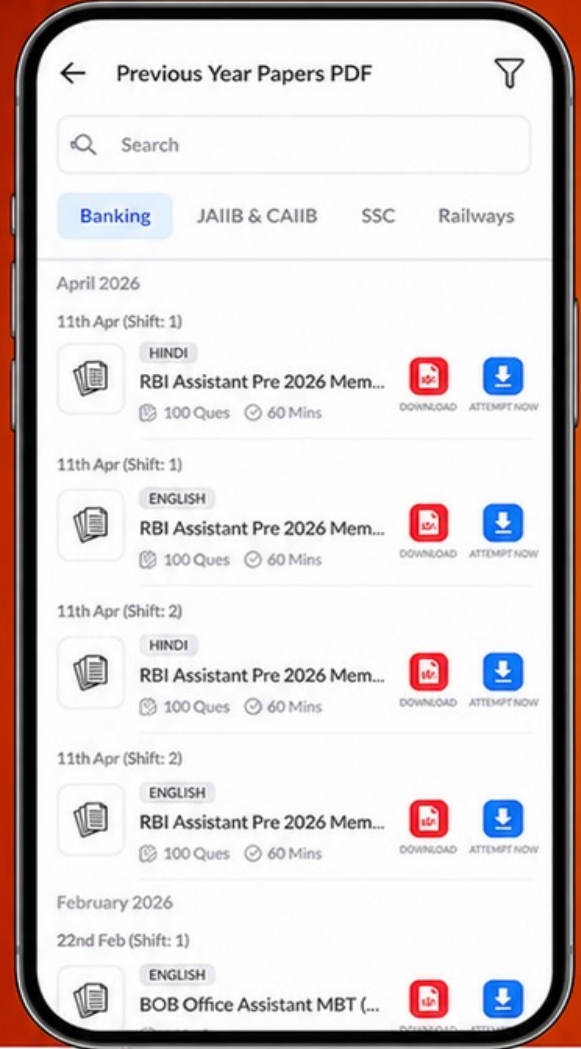
Free
25,000+
PDF's

High-Quality | Exam-Wise | Updated Regularly

ATTEMPT AS
MOCK



Turn PDFs into real exam experience.
Analyze. Improve. Succeed.



Topic-wise &
Exam-wise PDFs



Download &
Study Offline



Attempt as Mock
& Track Score



Smart Analysis
& Performance

AVAILABLE IN



Banking



SSC



Railway



Teaching



UGC



Agriculture



Nursing



Bihar



UP



Punjab



WB



Odisha



TN



AP & Telangana



Haryana



DOWNLOAD THE APP



Comprehension:

इस गद्यांश को ध्यानपूर्वक पढ़ें और चार विकल्पों में से प्रत्येक प्रश्न का सर्वोत्तम उत्तर चुनें।

मैं हैरान था कि यही दुबली-पतली गंगा, यही यमुना, यही सतलुज समतल मैदानों में उतरकर विशाल कैसे हो जाती है! इनका उछलना और कूदना, खिलखिलाकर लगातार हँसते जाना, इनकी यह भाव-भंगी, इनका यह उल्लास कहाँ गायब हो जाता है मैदान में जाकर? किसी लड़की को जब मैं देखता हूँ, किसी कली पर जब मेरा ध्यान अटक जाता है, तब भी इतना कौतूहल और विस्मय नहीं होता, जितना कि इन बेटियों की बाललीला देखकर! खेलते-खेलते जब ये जरा दूर निकल जाती हैं तो देवदार, चीड़, सरो, चिनार, सफेदा, कैल के जंगलों में पहुँचकर शायद इन्हें बीती बातें याद करने का मौका मिल जाता होगा। कौन जाने, बुड़ा हिमालय अपनी इन नटखट बेटियों के लिए कितना सिर धुनता होगा! बड़ी-बड़ी चोटियों से जाकर पूछिए तो उत्तर में विराट मौन के सिवाय उनके पास और रखा ही क्या है?

SubQuestion No : 39

Q.39 लेखक को कौतूहल और विस्मय सा कब प्रतीत होता है?

- Ans
- 1. छोटे बच्चों को देखकर
 - 2. कलियों को देखकर
 - 3. प्रकृति को देखकर
 - 4. नदियों की बाललीला देखकर

Question ID : 59445930002

Status : Not Answered

Chosen Option : --

Comprehension:

इस गद्यांश को ध्यानपूर्वक पढ़ें और चार विकल्पों में से प्रत्येक प्रश्न का सर्वोत्तम उत्तर चुनें।

मैं हैरान था कि यही दुबली-पतली गंगा, यही यमुना, यही सतलुज समतल मैदानों में उतरकर विशाल कैसे हो जाती है! इनका उछलना और कूदना, खिलखिलाकर लगातार हँसते जाना, इनकी यह भाव-भंगी, इनका यह उल्लास कहाँ गायब हो जाता है मैदान में जाकर? किसी लड़की को जब मैं देखता हूँ, किसी कली पर जब मेरा ध्यान अटक जाता है, तब भी इतना कौतूहल और विस्मय नहीं होता, जितना कि इन बेटियों की बाललीला देखकर! खेलते-खेलते जब ये जरा दूर निकल जाती हैं तो देवदार, चीड़, सरो, चिनार, सफेदा, कैल के जंगलों में पहुँचकर शायद इन्हें बीती बातें याद करने का मौका मिल जाता होगा। कौन जाने, बुड़ा हिमालय अपनी इन नटखट बेटियों के लिए कितना सिर धुनता होगा! बड़ी-बड़ी चोटियों से जाकर पूछिए तो उत्तर में विराट मौन के सिवाय उनके पास और रखा ही क्या है?

SubQuestion No : 40

Q.40 अनुच्छेद में बेटियाँ किसे कहाँ गया है?

- Ans
- 1. हिमालय को
 - 2. नदियों को
 - 3. पेड़-पौधों को
 - 4. बच्चों को

Question ID : 59445930001

Status : Not Answered

Chosen Option : --