

DSSSB SET

**Previous Year Paper
14 Jul, 2024 Shift 1**



**Test
Prime**

By Adda247

ALL EXAMS, ONE SUBSCRIPTION



Test. Analyze. Improve. Repeat.



Don't just *prepare*. *Perform*.

Test Prime — built only for mock tests.



1,50,000+
Mock Tests



25,000+
Previous Year Papers



800+
Exam Covered



500% Refund
on Selection



5 lakh+
Free Quizzes



Daily
Free PDFs



Job Alerts
Stay Updated

- Multilingual
- Detailed Solution
- Strong and Weak Areas



**All India
Rankings**

Compete with lakhs.
Rank. Improve. Repeat.



← Adda247 test prime

Rating ▾

Editors' choice

New



Adda247 Test Prime
Adda Education • Education
Installed



DOWNLOAD THE APP





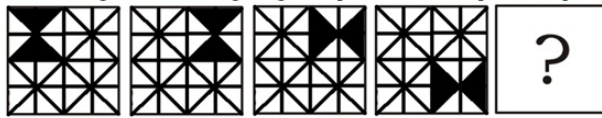
GOVT. OF NCT OF DELHI
Delhi Subordinate Services Selection Board
FC-18, Institutional Area, Karkardooma, Delhi – 110092.
www.dsssb.delhigovt.nic.in

Participant ID	
Participant Name	
Test Center Name	
Test Date	14/07/2024
Test Time	8:30 AM - 10:30 AM
Subject	Special Education Teacher

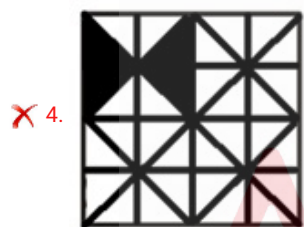
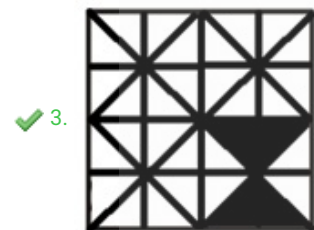
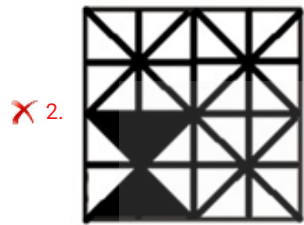
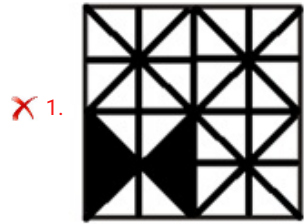
Section : General Intelligence and Reasoning Ability



Q.1 Select the figure from among the given options that can replace the question mark (?) in the following series.



Ans



Question ID : 630680896510
 Option 1 ID : 6306803512012
 Option 2 ID : 6306803512011
 Option 3 ID : 6306803512014
 Option 4 ID : 6306803512013

Q.2 Which two numbers in the following equation need to be interchanged so that the equation will be mathematically correct?

$$125 - 25 + 925 + 37 \times 8 = 100$$

- Ans
- ✓ 1. 25 and 125
 - ✗ 2. 37 and 125
 - ✗ 3. 25 and 37
 - ✗ 4. 8 and 25

Question ID : 630680896513
 Option 1 ID : 6306803512025
 Option 2 ID : 6306803512026
 Option 3 ID : 6306803512024
 Option 4 ID : 6306803512023

Q.3 Read the given statements and conclusions carefully. Assuming that the information given in the statements is true, even if it appears to be at variance with commonly known facts, decide which of the given conclusion(s) logically follow(s) from the statements.

Statements:

- (A) Some kites are rings.
- (B) Some rings are shoes.
- (C) All shoes are watches.

Conclusions:

- I. Some kites are watches.
- II. Some rings are watches.

- Ans**
- 1. Only conclusion II follows.
 - 2. Neither conclusion I nor II follows.
 - 3. Both conclusions I and II follow.
 - 4. Only conclusion I follows.

Question ID : 630680896503
Option 1 ID : 6306803511984
Option 2 ID : 6306803511985
Option 3 ID : 6306803511986
Option 4 ID : 6306803511983

Q.4 Read the following information carefully and answer the question that follows.

'C ÷ D' means 'C is the wife of D'.

'C - D' means 'C is the son of D'.

'C + D' means 'C is the mother of D'.

'C × D' means 'C is the daughter of D'.

How is R related to U in the expression 'U ÷ P - Q + S × R - W'?

- Ans**
- 1. Father-in-law
 - 2. Son-in-law
 - 3. Father
 - 4. Son

Question ID : 630680896502
Option 1 ID : 6306803511982
Option 2 ID : 6306803511981
Option 3 ID : 6306803511980
Option 4 ID : 6306803511979

Q.5 In a row of students, John is 15th from the left end and Bob is 40th from the right end. When they exchange their places, John becomes 30th from the left end. What is Bob's new position from the right?

- Ans**
- 1. 54th
 - 2. 25th
 - 3. 24th
 - 4. 55th

Question ID : 630680896499
Option 1 ID : 6306803511967
Option 2 ID : 6306803511969
Option 3 ID : 6306803511970
Option 4 ID : 6306803511968

Q.6 This question consists of a pair of words that have a certain relationship to each other. Select the pair that has the same relationship.

(The words must be considered as meaningful English words and must not be related to each other based on the number of letters/number of consonants/vowels in the word.)

Sculptor : Chisel

- Ans**
- 1. Plumber : Scalpel
 - 2. Dentist : Wrench
 - 3. Carpenter : Saw
 - 4. Surgeon : Trowel

Question ID : 630680896505
Option 1 ID : 6306803511992
Option 2 ID : 6306803511991
Option 3 ID : 6306803511994
Option 4 ID : 6306803511993

Q.7 Select the option in which the numbers are related in the same way as are the numbers in the given sets.

(14 : 196)

(23 : 322)

- Ans**
- 1. (18 : 262)
 - 2. (21 : 290)
 - 3. (20 : 280)
 - 4. (17 : 228)

Question ID : 630680896516
Option 1 ID : 6306803512038
Option 2 ID : 6306803512037
Option 3 ID : 6306803512036
Option 4 ID : 6306803512035

Q.8 Refer to the following letter, number and symbol series and answer the question that follows. Counting should be done from left to right only.

(Left) S & 4 G 6 4 R S % E 1 % @ K 9 T 6 S M # S S 7 ^ 2 Q 2 * N 6 8 (Right)

How many such symbols are there each of which is immediately preceded by a number and immediately followed by a letter?

- Ans**
- 1. Two
 - 2. One
 - 3. Three
 - 4. Four

Question ID : 630680896504
Option 1 ID : 6306803511989
Option 2 ID : 6306803511987
Option 3 ID : 6306803511988
Option 4 ID : 6306803511990

Q.9 In a certain code language, 'VENDOR' is coded as 'RIZVSH' and 'JUNGLE' is coded as 'RYNIPK'. How will 'HONEST' be coded in the same language?

- Ans**
- 1. RSLXWI
 - 2. QSLXWI
 - 3. RSLWVI
 - 4. QSLWVI

Question ID : 630680896500
Option 1 ID : 6306803511973
Option 2 ID : 6306803511972
Option 3 ID : 6306803511971
Option 4 ID : 6306803511974

Q.10 What should come in place of the question mark (?) in the given series based on the English alphabetical order?
MUB, QYF, UCJ, YGN, CKR, ?

- Ans**
- 1. GNU
 - 2. GNV
 - 3. GOU
 - 4. GOV

Question ID : 630680896508
Option 1 ID : 6306803512004
Option 2 ID : 6306803512006
Option 3 ID : 6306803512005
Option 4 ID : 6306803512003

Q.11 If '-' means '×', '+' means '+', '×' means '-' and '+' means '+', then what will come in place of the question mark (?) in the following equation?

$$25 \div 37 - 19 \times 91 + 7 = ?$$

- Ans**
- 1. 625
 - 2. 735
 - 3. 715
 - 4. 545

Question ID : 630680896512
Option 1 ID : 6306803512020
Option 2 ID : 6306803512021
Option 3 ID : 6306803512019
Option 4 ID : 6306803512022

Q.12 Based on the English alphabetical order, three of the following four letter-cluster pairs are alike in a certain way and thus form a group. Which letter-cluster pair DOES NOT belong to that group?

(Note: The odd one out is not based on the number of consonants/vowels or their position in the letter-cluster.)

- Ans**
- 1. MAGIC : DJHBN
 - 2. UMBRA : BSCNW
 - 3. HORSE : FTSPI
 - 4. CHAIR : SJBID

Question ID : 630680896506
Option 1 ID : 6306803511998
Option 2 ID : 6306803511996
Option 3 ID : 6306803511997
Option 4 ID : 6306803511995

Q.13 Four sets of numbers have been given, out of which three are alike in some manner and one is different. Select the one that is different.

- Ans**
- 1. (97, 79)
 - 2. (88, 73)
 - 3. (59, 44)
 - 4. (32, 17)

Question ID : 630680896518
Option 1 ID : 6306803512043
Option 2 ID : 6306803512044
Option 3 ID : 6306803512045
Option 4 ID : 6306803512046

Q.14 Based on the English alphabetical order, three of the following four letter-clusters are alike in a certain way and thus form a group. Which letter-cluster DOES NOT belong to that group?

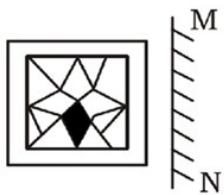
(Note: The odd one out is not based on the number of consonants/vowels or their position in the letter-cluster.)

- Ans**
- 1. BDFH
 - 2. OQST
 - 3. IKMO
 - 4. PRTV

Question ID : 630680896507
Option 1 ID : 6306803511999
Option 2 ID : 6306803512002
Option 3 ID : 6306803512000
Option 4 ID : 6306803512001



Q.15 Select the correct mirror image of the given figure when the mirror is placed at MN as shown below.



Ans

✓ 1.



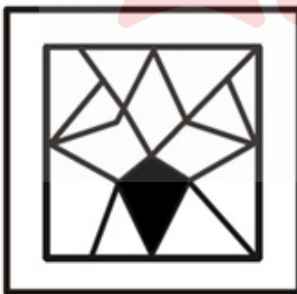
✗ 2.



✗ 3.



✗ 4.



Question ID : 630680896511
 Option 1 ID : 6306803512016
 Option 2 ID : 6306803512015
 Option 3 ID : 6306803512017
 Option 4 ID : 6306803512018

Q.16 Select the number from among the given options that can replace the question mark (?) in the following series.

158, 175, 192, 209, 226, 243, ?

- Ans**
- 1. 259
 - 2. 261
 - 3. 258
 - 4. 260

Question ID : 630680896514
Option 1 ID : 6306803512029
Option 2 ID : 6306803512027
Option 3 ID : 6306803512030
Option 4 ID : 6306803512028

Q.17 Select the option in which the numbers are related in the same way as are the numbers in the given sets.

(56, 78, 67)

(119, 165, 142)

- Ans**
- 1. (456 , 193, 282)
 - 2. (99, 33 , 88)
 - 3. (234, 122, 178)
 - 4. (365, 78 , 182)

Question ID : 630680896517
Option 1 ID : 6306803512042
Option 2 ID : 6306803512040
Option 3 ID : 6306803512041
Option 4 ID : 6306803512039

Q.18 Select the number from among the given options that can replace the question mark (?) in the following series.

217, 227, 244, 268, 299, 337, ?

- Ans**
- 1. 383
 - 2. 381
 - 3. 382
 - 4. 380

Question ID : 630680896515
Option 1 ID : 6306803512032
Option 2 ID : 6306803512033
Option 3 ID : 6306803512031
Option 4 ID : 6306803512034

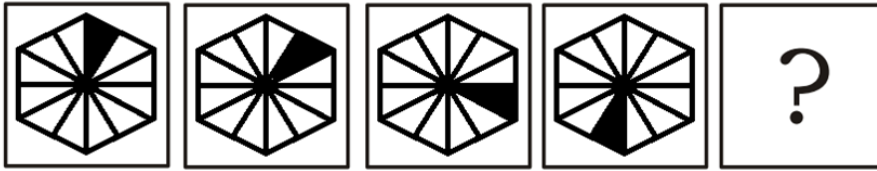
Q.19 Pointing to a man in a photograph, a woman said "He is the only son of the father of my mother's husband." How is the woman related to the man in the photograph?

- Ans**
- 1. Mother
 - 2. Wife
 - 3. Sister
 - 4. Daughter

Question ID : 630680896501
Option 1 ID : 6306803511977
Option 2 ID : 6306803511975
Option 3 ID : 6306803511976
Option 4 ID : 6306803511978

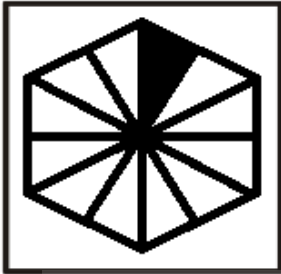


Q.20 Select the figure from among the given options that can replace the question mark (?) in the following series.



Ans

✗ 1.



✗ 2.



✗ 3.



✓ 4.



Question ID : 630680896509
 Option 1 ID : 6306803512008
 Option 2 ID : 6306803512010
 Option 3 ID : 6306803512007
 Option 4 ID : 6306803512009

Q.1 FIH Women's Hockey Olympic Qualifiers were held in which of the following Indian cities in January 2024?

- Ans
- 1. New Delhi
 - 2. Kolkata
 - 3. Ranchi
 - 4. Bhubaneswar

Question ID : 630680896228
Option 1 ID : 6306803510924
Option 2 ID : 6306803510926
Option 3 ID : 6306803510923
Option 4 ID : 6306803510925

Q.2 In January 2024, the Reserve Bank has proposed increasing the upper ceiling on dividend payout ratio to _____ if the net NPA is zero from the earlier ceiling of 40%?

- Ans
- 1. 30%
 - 2. 60%
 - 3. 50%
 - 4. 35%

Question ID : 630680896232
Option 1 ID : 6306803510939
Option 2 ID : 6306803510942
Option 3 ID : 6306803510941
Option 4 ID : 6306803510940

Q.3 The key repo rate has been hiked on 8 December 2023 by the Monetary Policy Committee (MPC) of the Reserve Bank of India (RBI) by 25 basis points and currently stands at which of the following?

- Ans
- 1. 6.50%
 - 2. 6.25%
 - 3. 8%
 - 4. 6.75%

Question ID : 630680896231
Option 1 ID : 6306803510936
Option 2 ID : 6306803510935
Option 3 ID : 6306803510938
Option 4 ID : 6306803510937

Q.4 Which of the following books by Neelam Saran Gour won the Sahitya Akademi Award 2023 in the English category?

- Ans
- 1. 'Requiem In Raga Janaki'
 - 2. 'All the Lives We Never Lived'
 - 3. 'Things to Leave Behind'
 - 4. 'When God is a Traveller'

Question ID : 630680896236
Option 1 ID : 6306803510957
Option 2 ID : 6306803510958
Option 3 ID : 6306803510956
Option 4 ID : 6306803510955

Q.5 Meghadutam, Abhijnanashakuntalam and Vikramorvashi are some of the literature works of which of the following poets of the court of Chandragupta II?

- Ans
- 1. Amarasimha
 - 2. Kalidasa
 - 3. Shudraka
 - 4. Banabhatta

Question ID : 630680896235
Option 1 ID : 6306803510953
Option 2 ID : 6306803510952
Option 3 ID : 6306803510954
Option 4 ID : 6306803510951

Q.6 The Asiatic Society of Bengal was founded by which of the following Orientalists in 1784?

- Ans
- 1. Sir Jonathan Duncan
 - 2. Sir George Hillarow Barlow
 - 3. Sir William Jones
 - 4. Sir Warren Hastings

Question ID : 630680896233
Option 1 ID : 6306803510944
Option 2 ID : 6306803510945
Option 3 ID : 6306803510946
Option 4 ID : 6306803510943

Q.7 The war that spread beyond Southern India and into Bengal, where British forces under Robert Clive recaptured Calcutta from Nawab Sirajud-Daulah, who had support of the French, was _____.

- Ans
- 1. The Battle of Buxar in 1764
 - 2. the Battle of Plassey in 1757
 - 3. The Battle of Adyar in 1746
 - 4. The Battle of Wandiwash in 1760

Question ID : 630680896234
Option 1 ID : 6306803510948
Option 2 ID : 6306803510949
Option 3 ID : 6306803510950
Option 4 ID : 6306803510947

Q.8 Which of the following statements is/are true?

1. The Chief Justice and other judges of the Supreme Court are appointed by the President of India.
2. No person who has held office of a judge of the Supreme Court is allowed to plead as an advocate in any court or before any authority within the territory of India.
3. The judges of the Supreme Court are paid such salaries as are determined by the Parliament from time to time.

Ans 1. 1, 2 and 3

2. Only 1 and 3

3. Only 1

4. Only 2

Question ID : 630680896245
Option 1 ID : 6306803510994
Option 2 ID : 6306803510993
Option 3 ID : 6306803510991
Option 4 ID : 6306803510992

Q.9 The Union Cabinet on 5 January 2024 approved the overarching scheme 'PRITHvi Vigyan (PRITHVI)' of the Ministry of Earth Sciences for implementation during the period 2021-26 at an overall cost of ₹ _____ crores.

Ans 1. 5400

2. 4797

3. 2544

4. 5267

Question ID : 630680896229
Option 1 ID : 6306803510929
Option 2 ID : 6306803510928
Option 3 ID : 6306803510927
Option 4 ID : 6306803510930

Q.10 Which of the following statements is/are CORRECT about a Financial Bill?

- Statement 1: Financial Bills, other than Money Bills, are covered under Article 117.
Statement 2: A Financial Bill coming under the purview of Clause (2) can be introduced only in the Lok Sabha.
Statement 3: A Financial Bill coming under the purview of Clause (3) may be introduced in either House of the Parliament.

Ans 1. Only 2

2. Only 1 and 2

3. Only 1 and 3

4. Only 3

Question ID : 630680896244
Option 1 ID : 6306803510990
Option 2 ID : 6306803510987
Option 3 ID : 6306803510989
Option 4 ID : 6306803510988

Q.11 Kokborok is the official language of which state ?

- Ans
- 1. Karnataka
 - 2. Uttarakhand
 - 3. Andra Pradesh
 - 4. Tripura

Question ID : 630680896237
Option 1 ID : 6306803510960
Option 2 ID : 6306803510962
Option 3 ID : 6306803510961
Option 4 ID : 6306803510959

Q.12 As per Census 2011, which of the following is/are CORRECT with respect to literacy rates in India?

- I. The literacy rate in the country was 74.04%.
- II. The literacy rate for males was 82.14%.
- III. The literacy rate for females was more than for males.

- Ans
- 1. Only I
 - 2. Only I and II
 - 3. Only II and III
 - 4. Only III

Question ID : 630680896242
Option 1 ID : 6306803510979
Option 2 ID : 6306803510981
Option 3 ID : 6306803510982
Option 4 ID : 6306803510980

Q.13 Which of the following rivers makes the second biggest waterfall in India, known as Sivasamudram?

- Ans
- 1. Mahanadi
 - 2. Krishna
 - 3. Godavari
 - 4. Kaveri

Question ID : 630680896239
Option 1 ID : 6306803510967
Option 2 ID : 6306803510968
Option 3 ID : 6306803510970
Option 4 ID : 6306803510969

Q.14 What is the full form of 'RO' in 'RO Water Purifying System'?

- Ans
- 1. Reverse Orientation
 - 2. Reserve Osmosis
 - 3. Recover Osmosis
 - 4. Reverse Osmosis

Question ID : 630680896247
Option 1 ID : 6306803511000
Option 2 ID : 6306803511001
Option 3 ID : 6306803511002
Option 4 ID : 6306803510999

Q.15 The Indian Constitution provides for citizenship for anyone who has been ordinarily resident in the territory of India for not less than ____.

- Ans
- 1. 5 years
 - 2. 3 years
 - 3. 2 years
 - 4. 4 years

Question ID : 630680896243
Option 1 ID : 6306803510986
Option 2 ID : 6306803510984
Option 3 ID : 6306803510983
Option 4 ID : 6306803510985

Q.16 Indira Point, which is considered the southernmost tip of India, is located on which of the following islands?

- Ans
- 1. Little Andaman Island
 - 2. Long Island
 - 3. Campbell Bay
 - 4. Great Nicobar Island

Question ID : 630680896240
Option 1 ID : 6306803510971
Option 2 ID : 6306803510974
Option 3 ID : 6306803510973
Option 4 ID : 6306803510972

Q.17 Deficiency of which of the following vitamins causes rickets in children?

- Ans
- 1. Vitamin C
 - 2. Vitamin E
 - 3. Vitamin A
 - 4. Vitamin D

Question ID : 630680896246
Option 1 ID : 6306803510996
Option 2 ID : 6306803510998
Option 3 ID : 6306803510995
Option 4 ID : 6306803510997

Q.18 Which of the following states recently launched the Indira Gandhi Pyaari Behna Samman Nidhi Yojana, which seeks to provide a monthly pension of ₹1,500 to women aged 18 and above?

- Ans
- 1. Uttarakhand
 - 2. Himachal Pradesh
 - 3. Punjab
 - 4. Andhra Pradesh

Question ID : 630680896230
Option 1 ID : 6306803510932
Option 2 ID : 6306803510931
Option 3 ID : 6306803510933
Option 4 ID : 6306803510934

Q.19 For the purpose of Census 2011, what was the minimum age of a person to be treated as literate?

- Ans 1. 7 years
 2. 9 years
 3. 6 years
 4. 5 years

Question ID : 630680896241
Option 1 ID : 6306803510977
Option 2 ID : 6306803510978
Option 3 ID : 6306803510976
Option 4 ID : 6306803510975

Q.20 The Hemis Festival, which marks the birth anniversary of Guru Padmasambhava, is celebrated in which of the following states/UTs?

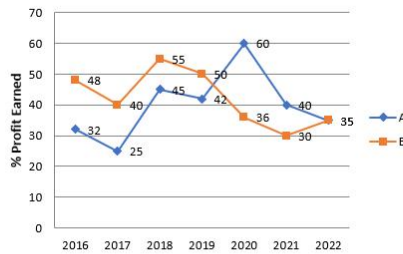
- Ans 1. Arunachal Pradesh
 2. Manipur
 3. Mizoram
 4. Ladakh

Question ID : 630680896238
Option 1 ID : 6306803510966
Option 2 ID : 6306803510965
Option 3 ID : 6306803510964
Option 4 ID : 6306803510963

Section : Arithmetical and Numerical Ability

Adda247

Q.1 The following line-graph shows the percentage profit earned by two companies A and B during the period of 2016 to 2022.



$$\text{Profit \%} = \frac{\text{Profit Earned}}{\text{Total Investment}} \times 100\%$$

If the total amount invested by the two companies in 2021 was ₹27 lakh, while the amount invested by Company B was 50% of the amount invested by Company A, what was the total profit earned (in ₹ lakh) by the two companies together in that year?

- Ans
- 1. 10.8
 - 2. 9.9
 - 3. 8.4
 - 4. 10.2

Question ID : 630680896534
 Option 1 ID : 6306803512110
 Option 2 ID : 6306803512108
 Option 3 ID : 6306803512107
 Option 4 ID : 6306803512109

Q.2 एक व्यक्ति के वेतन में 15% की कमी कर दी जाती है। उसके कम किए गए वेतन को कितने प्रतिशत बढ़ाया जाना चाहिए ताकि वह उसके मूल वेतन के बराबर हो जाए?

- Ans
- 1. $11\frac{7}{15}\%$
 - 2. $17\frac{11}{17}\%$
 - 3. $13\frac{11}{13}\%$
 - 4. $16\frac{11}{17}\%$

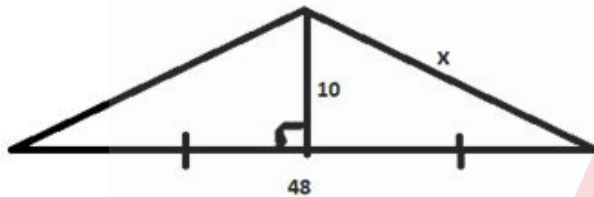
Question ID : 630680896537
 Option 1 ID : 6306803512119
 Option 2 ID : 6306803512122
 Option 3 ID : 6306803512120
 Option 4 ID : 6306803512121

Q.3 The difference between the interests on a certain sum at the rate of 16% per annum for $1\frac{1}{2}$ years when interest is compounded half-yearly and when interest is compounded yearly is ₹69.12. What is the sum (in ₹)?

- Ans**
- 1. 11,500
 - 2. 12,000
 - 3. 10,000
 - 4. 10,500

Question ID : 630680896532
 Option 1 ID : 6306803512101
 Option 2 ID : 6306803512102
 Option 3 ID : 6306803512099
 Option 4 ID : 6306803512100

Q.4 Find the perimeter of the given figure.



- Ans**
- 1. 100 units
 - 2. 75 units
 - 3. 90 units
 - 4. 80 units

Question ID : 630680896546
 Option 1 ID : 6306803512158
 Option 2 ID : 6306803512155
 Option 3 ID : 6306803512157
 Option 4 ID : 6306803512156

Q.5 A and B started a business by investing their capitals in the ratio 5 : 3. After 5 months, B withdrew one-third of his capital and A added 40% of his capital. At the end of the year, if the total profit was ₹25.75 lakhs, then A's share (in ₹ lakhs) was _____.

- Ans**
- 1. 22.2
 - 2. 18.5
 - 3. 14.4
 - 4. 16.5

Question ID : 630680896543
 Option 1 ID : 6306803512146
 Option 2 ID : 6306803512145
 Option 3 ID : 6306803512143
 Option 4 ID : 6306803512144

Q.6 The ratio of the present ages of a father and son is 5 : 2 and their average age is 35 years. What will be the ratio of their respective ages after 5 years?

- Ans**
- 1. 5 : 11
 - 2. 11 : 5
 - 3. 7 : 13
 - 4. 13 : 7

Question ID : 630680896542
 Option 1 ID : 6306803512139
 Option 2 ID : 6306803512140
 Option 3 ID : 6306803512141
 Option 4 ID : 6306803512142

Q.7 The table shows the total number of employees in different departments of an organisation and the percentage of females and males. Study the table and answer the question that follows.

Department	Total No. of Employees	% of Females	% of Males
A	840	55	45
B	220	65	35
C	900	77	23
D	360	35	65
E	450	56	44
F	540	60	40

The total number of female employees in department D forms approximately how much percentage of the total number of male employees in Department B?

- Ans**
- 1. 157%
 - 2. 164%
 - 3. 147%
 - 4. 152%

Question ID : 630680896535
 Option 1 ID : 6306803512113
 Option 2 ID : 6306803512114
 Option 3 ID : 6306803512111
 Option 4 ID : 6306803512112

Q.8 Two trains of equal lengths take 10 seconds and 14 seconds, respectively, to cross a signal pole. If the length of each train is 280 m, then in how many seconds will they cross each other when travelling in opposite directions?

- Ans**
- 1. $10\frac{2}{5}$
 - 2. $12\frac{2}{3}$
 - 3. $11\frac{2}{3}$
 - 4. $13\frac{2}{5}$

Question ID : 630680896545
 Option 1 ID : 6306803512151
 Option 2 ID : 6306803512153
 Option 3 ID : 6306803512152
 Option 4 ID : 6306803512154

Q.9 Sunil's income is 20% more than that of Sujith's. Sunil and Sujith save ₹4,800 and ₹5,000, respectively. If Sunil's expenditure is 12% more than Sujith's income, then 42% of Sunil and Sujith's total expenditure is _____.

- Ans**
- 1. ₹52,134
 - 2. ₹53,142
 - 3. ₹51,324
 - 4. ₹54,132

Question ID : 630680896538
 Option 1 ID : 6306803512124
 Option 2 ID : 6306803512125
 Option 3 ID : 6306803512123
 Option 4 ID : 6306803512126

Q.10 If the 9-digit number $47x6290y6$ is divisible by 88, then which of the following options can be the value of $(x+y)$?

- Ans**
- 1. 12
 - 2. 19
 - 3. 15
 - 4. 17

Question ID : 630680896536
 Option 1 ID : 6306803512115
 Option 2 ID : 6306803512118
 Option 3 ID : 6306803512116
 Option 4 ID : 6306803512117

Q.11 A certain sum of money amounts to ₹8,245 in 2.5 years and to ₹9,112 in 4 years. The rate of simple interest per annum is _____.

- Ans**
- 1. 8.0%
 - 2. 8.5%
 - 3. 9.0%
 - 4. 10.5%

Question ID : 630680896530
Option 1 ID : 6306803512091
Option 2 ID : 6306803512092
Option 3 ID : 6306803512093
Option 4 ID : 6306803512094

Q.12 If the radius of a metallic solid sphere is increased by 8.5 cm, then its surface area increases by $1479 \pi \text{ cm}^2$. If the density of metal is 0.15 g/cm^3 , then the approximate weight (in kg) of the original sphere is _____. (Use $\pi = \frac{22}{7}$).

- Ans**
- 1. 4.12
 - 2. 3.37
 - 3. 6.27
 - 4. 5.73

Question ID : 630680896547
Option 1 ID : 6306803512160
Option 2 ID : 6306803512159
Option 3 ID : 6306803512162
Option 4 ID : 6306803512161

Q.13 A mechanic sells a scooter for ₹16,030.08, after giving three successive discounts of 12%, $x\%$ and 10% on its marked price of ₹22,000. If it is, instead, sold by giving a single discount of $2x\%$, then its selling price (in ₹) will be _____.

- Ans**
- 1. 16,980
 - 2. 18,840
 - 3. 18,480
 - 4. 14,880

Question ID : 630680896541
Option 1 ID : 6306803512136
Option 2 ID : 6306803512138
Option 3 ID : 6306803512137
Option 4 ID : 6306803512135

Q.14 Out of 15 persons, 9 persons spent ₹60 each on their meals while the remaining persons spent ₹30 more than the average expenditure of all 15. The total amount of money (in ₹) spent by all of them was _____.

- Ans**
- 1. 1,000
 - 2. 1,200
 - 3. 900
 - 4. 1,500

Question ID : 630680896528
 Option 1 ID : 6306803512084
 Option 2 ID : 6306803512085
 Option 3 ID : 6306803512083
 Option 4 ID : 6306803512086

Q.15 5 वर्ष पहले एक पति, उसकी पत्नी और उसके बेटे की औसत आयु 31 वर्ष थी और 8 वर्ष पहले उसकी पत्नी और उसके बेटे की औसत आयु 25 वर्ष थी। तो, पति की वर्तमान आयु (वर्षों में) _____ है।

- Ans**
- 1. 66
 - 2. 54
 - 3. 42
 - 4. 36

Question ID : 630680896529
 Option 1 ID : 6306803512090
 Option 2 ID : 6306803512089
 Option 3 ID : 6306803512088
 Option 4 ID : 6306803512087

Q.16 12 men can finish a piece of work in 36 days and 20 women can finish the same work in 25 days. 8 men started the work and after 6 days 10 women joined them. In how many days can they complete the total work?

- Ans**
- 1. $14\frac{1}{13}$
 - 2. $24\frac{7}{13}$
 - 3. $29\frac{1}{13}$
 - 4. $13\frac{1}{29}$

Question ID : 630680896544
 Option 1 ID : 6306803512147
 Option 2 ID : 6306803512148
 Option 3 ID : 6306803512150
 Option 4 ID : 6306803512149

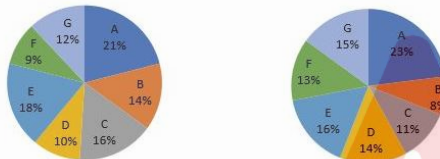
Q.17 The cost prices of two articles, A and B, are the same. A is sold at a profit of 20% and B is sold for ₹300 more than the selling price of A. If there is a net profit of 32% in the entire transaction, then what is the cost price (in ₹) of each article?

- Ans**
- 1. 2,100
 - 2. 1,800
 - 3. 1,250
 - 4. 1,500

Question ID : 630680896539
 Option 1 ID : 6306803512130
 Option 2 ID : 6306803512129
 Option 3 ID : 6306803512127
 Option 4 ID : 6306803512128

Q.18 The following pie charts show the distribution of the students of graduate and post-graduate levels in 7 different institutions A, B, C, D, E, F and G in a city.

Total number of students at graduate level = 25,600 **Total number of students at post-graduate level = 19,200**



What is the ratio between the total number of students studying at post-graduation level in institutions D and F to the total number of students studying at graduation level in institutions A and C?

- Ans**
- 1. 4 : 3
 - 2. 148 : 81
 - 3. 81 : 148
 - 4. 3 : 4

Question ID : 630680896533
 Option 1 ID : 6306803512104
 Option 2 ID : 6306803512106
 Option 3 ID : 6306803512105
 Option 4 ID : 6306803512103

Q.19 A certain sum amounts to ₹27,440 in 2 years at 12% per annum compound interest. What will be the approximate compound interest (in ₹) on the same sum for the same period at double the rate of interest, if the interest is compounded half-yearly?

- Ans**
- 1. 10,645
 - 2. 11,456
 - 3. 12,546
 - 4. 10,465

Question ID : 630680896531
 Option 1 ID : 6306803512096
 Option 2 ID : 6306803512097
 Option 3 ID : 6306803512098
 Option 4 ID : 6306803512095

Q.20 The cost price of a hard drive is ₹3,600 more than the cost price of a pen drive. If the hard drive is sold at an 8% loss and the pen drive at a 182% profit, then there is a profit of 12% in the entire transaction. What is the original cost price (in ₹) of the hard drive?

- Ans**
- 1. 3,800
 - 2. 3,600
 - 3. 4,080
 - 4. 480

Question ID : 630680896540
Option 1 ID : 6306803512133
Option 2 ID : 6306803512132
Option 3 ID : 6306803512134
Option 4 ID : 6306803512131

Section : Test of English Language and Comprehension

Q.1 Select the most appropriate meaning of the given idiom.

To call a spade a spade

- Ans**
- 1. Be friendly with the working-class people
 - 2. Avoid taking any risks
 - 3. Speak plainly and openly
 - 4. Know the names of tools

Question ID : 630680896213
Option 1 ID : 6306803510869
Option 2 ID : 6306803510868
Option 3 ID : 6306803510870
Option 4 ID : 6306803510867

Q.2 Select the most appropriate option to fill in the blank.

The tomatoes rolled off into all corners of the shop _____ the bag was torn.

- Ans**
- 1. but
 - 2. because
 - 3. though
 - 4. while

Question ID : 630680896208
Option 1 ID : 6306803510850
Option 2 ID : 6306803510849
Option 3 ID : 6306803510848
Option 4 ID : 6306803510847

Q.3 Select the segment which has a spelling error in the given sentence. If there is no error, select 'No error'.

Any voilation of the order banning use of drinking water for gardening would attract a penalty of Rupees 5000/-the officials said.

- Ans
- 1. drinking water for gardening would attract
 - 2. No error
 - 3. a penalty of Rupees 5000/-the officials said
 - 4. Any voilation of the order banning use of

Question ID : 630680896217
Option 1 ID : 6306803510884
Option 2 ID : 6306803510886
Option 3 ID : 6306803510885
Option 4 ID : 6306803510883

Q.4 Select the segment which has a spelling error in the given sentence. If there is no error, select 'No error'.

These stations play a critical role in fasilitating communication, data transfer, tracking and control during the crucial early stages of a satellite's journey to orbit.

- Ans
- 1. the crucial early stages of a satellite's journey to orbit
 - 2. data transfer, tracking and control during
 - 3. No error
 - 4. These stations play a critical role in fasilitating communication

Question ID : 630680896218
Option 1 ID : 6306803510889
Option 2 ID : 6306803510888
Option 3 ID : 6306803510890
Option 4 ID : 6306803510887

Q.5 Select the most appropriate option to fill in the blank.

Be careful to close the door _____, it makes a loud sound if it bangs.

- Ans
- 1. freely
 - 2. loosely
 - 3. slowly
 - 4. easily

Question ID : 630680896207
Option 1 ID : 6306803510845
Option 2 ID : 6306803510843
Option 3 ID : 6306803510844
Option 4 ID : 6306803510846

Q.6 Find the one-word that means the same as the underlined group of words.

Sudha is frequently visiting doctors to get medicines for her _____ cough. (continuing or occurring again and again for a long time)

- Ans
- 1. persistent
 - 2. perilous
 - 3. pursuant
 - 4. permanent

Question ID : 630680896211
Option 1 ID : 6306803510860
Option 2 ID : 6306803510862
Option 3 ID : 6306803510859
Option 4 ID : 6306803510861

Q.7 Given below are four jumbled sentences. Select the option that gives their correct order forming a meaningful and coherent paragraph.

- A. Left untreated, a speech impediment can make it difficult for children to learn to read and write.
- B . Children with speech impediments might also have trouble socializing.
- C. Speech impediment, or speech disorder, happens when your child can't speak at all, or can't speak so people understand what they're saying.
- D. In some cases, a speech impediment is a sign of physical or developmental differences.

- Ans
- 1. BDCA
 - 2. BCAD
 - 3. CDAB
 - 4. CBAD

Question ID : 630680896209
Option 1 ID : 6306803510851
Option 2 ID : 6306803510854
Option 3 ID : 6306803510852
Option 4 ID : 6306803510853

Q.8 Select the segment which has a spelling error in the given sentence. If there is no error, select 'No error'.

The effectiveness of a hair cream depends on the chosen ingrediants and your specific hair needs.

- Ans
- 1. depends on the chosen ingrediants
 - 2. No error
 - 3. The effectiveness of a hair cream
 - 4. and your specific hair needs

Question ID : 630680896219
Option 1 ID : 6306803510892
Option 2 ID : 6306803510894
Option 3 ID : 6306803510891
Option 4 ID : 6306803510893

Q.9 Select the most appropriate antonym of the given word.

PRETENSE

- Ans 1. intensity
 2. reality
 3. exasperation
 4. impatience

Question ID : 630680896215
Option 1 ID : 6306803510876
Option 2 ID : 6306803510878
Option 3 ID : 6306803510877
Option 4 ID : 6306803510875

Q.10 Select the most appropriate option to fill in the blank.

Rohit had _____ options left when he couldn't get a cab, he had to take a bus.

- Ans 1. few
 2. much
 3. enough
 4. little

Question ID : 630680896206
Option 1 ID : 6306803510840
Option 2 ID : 6306803510842
Option 3 ID : 6306803510841
Option 4 ID : 6306803510839

Q.11 Select the most appropriate option to fill in the blank.

It was _____ most crucial moment in her life.

- Ans 1. an
 2. one
 3. a
 4. the

Question ID : 630680896205
Option 1 ID : 6306803510836
Option 2 ID : 6306803510837
Option 3 ID : 6306803510835
Option 4 ID : 6306803510838

Q.12 Select the most appropriate synonym of the given word.

ZENITH

- Ans 1. summit
 2. establishment
 3. foundation
 4. nadir

Question ID : 630680896216
Option 1 ID : 6306803510880
Option 2 ID : 6306803510882
Option 3 ID : 6306803510881
Option 4 ID : 6306803510879

Q.13 Select the most appropriate meaning of the given idiom.

To give someone free rein means to give

- Ans 1. the orders to ride a horse and go
 2. training in horse riding
 3. allow them to leave before everyone else
 4. the freedom to do, say, or feel what they want

Question ID : 630680896212
Option 1 ID : 6306803510863
Option 2 ID : 6306803510864
Option 3 ID : 6306803510866
Option 4 ID : 6306803510865

Q.14 Find the one-word that means the same as the underlined group of words.

Gymnastics as a sport is one that is ____ (relates to one particular different or original person than to a group or team).

- Ans 1. irregular
 2. peculiar
 3. common
 4. individualistic

Question ID : 630680896210
Option 1 ID : 6306803510855
Option 2 ID : 6306803510858
Option 3 ID : 6306803510856
Option 4 ID : 6306803510857

Q.15 Select the most appropriate meaning of the given proverb.

Don't judge a book by its cover

- Ans 1. Don't judge someone or something by appearance alone
2. Make use of every opportunity that comes your way
3. Don't be afraid to give your honest opinion to anyone
4. Check carefully before you buy anything

Question ID : 630680896214
Option 1 ID : 6306803510873
Option 2 ID : 6306803510874
Option 3 ID : 6306803510872
Option 4 ID : 6306803510871

Comprehension:

Read the following passage and answer the questions.

Crying over spilt milk is futile. Crocodile tears are fake and manipulative. Crying wolf too is false, and dangerous. Indulging in any of the above would be a 'crying shame'; the most reprehensible behaviour. And those blubbing Everly Brothers? Leave 'em to their cryin' in the rain! There's no place in polite society for exposure that private. Nothing good's ever said about shedding a tear; our intrinsically human emissions of joy, sadness, and frustration. Because nothing good can come of it, or so we've been convinced.

The patriarchy comes down hard on weeping. 'Big boys don't cry' they command, insisting lads 'man up' and plough on amidst upheavals, without examination or even acknowledgement of their emotions. Our dammed-up waterworks then trickle into every niche and crevice, not just of our bodies but the body-politic, poisoning it like slow-acting arsenic. Didn't large-scale, pent-up resentments result in two World Wars, don't they even now trigger mass turmoil?

When 'celebs', especially male, break down in public, such as Cristiano Ronaldo or Novak Djokovic, derision is generally rained down upon them, as if Charles Dickens hadn't reprimanded, "Heaven knows we need never be ashamed of our tears, for they are rain upon the blinding dust of earth..." or Justin Timberlake wailed, "Cry me a river", unequivocally encouraging his brethren. Yet, strong women too are exhorted to never give in to such 'womanly' infirmity, or be forever stereotyped as 'the weaker sex'. Growing up in a house full of stern women, I was taught not to snivel (even the sound of words that denote crying repel!). Learning to walk in infancy, I already knew I should hold back the tears when I fell and scraped my knee. My formidable foremothers intended to build character, but I wonder now if they would have stood me in better stead by allowing me to express anguish.

SubQuestion No : 16

Q.16 Which word in the passage means the same as 'admonish'?

- Ans 1. turmoil
2. snivel
3. exhort
4. reprimand

Question ID : 630680896223
Option 1 ID : 6306803510904
Option 2 ID : 6306803510906
Option 3 ID : 6306803510905
Option 4 ID : 6306803510903

Comprehension:

Read the following passage and answer the questions.

Crying over spilt milk is futile. Crocodile tears are fake and manipulative. Crying wolf too is false, and dangerous. Indulging in any of the above would be a 'crying shame'; the most reprehensible behaviour. And those blubbing Everly Brothers? Leave 'em to their cryin' in the rain! There's no place in polite society for exposure that private. Nothing good's ever said about shedding a tear; our intrinsically human emissions of joy, sadness, and frustration. Because nothing good can come of it, or so we've been convinced.

The patriarchy comes down hard on weeping. 'Big boys don't cry' they command, insisting lads 'man up' and plough on amidst upheavals, without examination or even acknowledgement of their emotions. Our dammed-up waterworks then trickle into every niche and crevice, not just of our bodies but the body-politic, poisoning it like slow-acting arsenic. Didn't large-scale, pent-up resentments result in two World Wars, don't they even now trigger mass turmoil?

When 'celebs', especially male, break down in public, such as Cristiano Ronaldo or Novak Djokovic, derision is generally rained down upon them, as if Charles Dickens hadn't reprimanded, "Heaven knows we need never be ashamed of our tears, for they are rain upon the blinding dust of earth..." or Justin Timberlake wailed, "Cry me a river", unequivocally encouraging his brethren. Yet, strong women too are exhorted to never give in to such 'womanly' infirmity, or be forever stereotyped as 'the weaker sex'. Growing up in a house full of stern women, I was taught not to snivel (even the sound of words that denote crying repel!). Learning to walk in infancy, I already knew I should hold back the tears when I fell and scraped my knee. My formidable foremothers intended to build character, but I wonder now if they would have stood me in better stead by allowing me to express anguish.

SubQuestion No : 17

Q.17 The most appropriate antonym of the word "intrinsically"

- Ans**
- 1. ultimately
 - 2. fundamentally
 - 3. superficially
 - 4. eventually

Question ID : 630680896224
Option 1 ID : 6306803510909
Option 2 ID : 6306803510908
Option 3 ID : 6306803510907
Option 4 ID : 6306803510910

Comprehension:

Read the following passage and answer the questions.

Crying over spilt milk is futile. Crocodile tears are fake and manipulative. Crying wolf too is false, and dangerous. Indulging in any of the above would be a 'crying shame'; the most reprehensible behaviour. And those blubbing Everly Brothers? Leave 'em to their cryin' in the rain! There's no place in polite society for exposure that private. Nothing good's ever said about shedding a tear; our intrinsically human emissions of joy, sadness, and frustration. Because nothing good can come of it, or so we've been convinced.

The patriarchy comes down hard on weeping. 'Big boys don't cry' they command, insisting lads 'man up' and plough on amidst upheavals, without examination or even acknowledgement of their emotions. Our dammed-up waterworks then trickle into every niche and crevice, not just of our bodies but the body-politic, poisoning it like slow-acting arsenic. Didn't large-scale, pent-up resentments result in two World Wars, don't they even now trigger mass turmoil?

When 'celebs', especially male, break down in public, such as Cristiano Ronaldo or Novak Djokovic, derision is generally rained down upon them, as if Charles Dickens hadn't reprimanded, "Heaven knows we need never be ashamed of our tears, for they are rain upon the blinding dust of earth..." or Justin Timberlake wailed, "Cry me a river", unequivocally encouraging his brethren. Yet, strong women too are exhorted to never give in to such 'womanly' infirmity, or be forever stereotyped as 'the weaker sex'. Growing up in a house full of stern women, I was taught not to snivel (even the sound of words that denote crying repel!). Learning to walk in infancy, I already knew I should hold back the tears when I fell and scraped my knee. My formidable foremothers intended to build character, but I wonder now if they would have stood me in better stead by allowing me to express anguish.

SubQuestion No : 18

Q.18 The tone of the passage is

- Ans
- 1. melancholy
 - 2. sarcastic
 - 3. moralistic
 - 4. threatening

Question ID : 630680896225
Option 1 ID : 6306803510913
Option 2 ID : 6306803510912
Option 3 ID : 6306803510911
Option 4 ID : 6306803510914

Comprehension:

Read the following passage and answer the questions.

Crying over spilt milk is futile. Crocodile tears are fake and manipulative. Crying wolf too is false, and dangerous. Indulging in any of the above would be a 'crying shame'; the most reprehensible behaviour. And those blubbing Everly Brothers? Leave 'em to their cryin' in the rain! There's no place in polite society for exposure that private. Nothing good's ever said about shedding a tear; our intrinsically human emissions of joy, sadness, and frustration. Because nothing good can come of it, or so we've been convinced.

The patriarchy comes down hard on weeping. 'Big boys don't cry' they command, insisting lads 'man up' and plough on amidst upheavals, without examination or even acknowledgement of their emotions. Our dammed-up waterworks then trickle into every niche and crevice, not just of our bodies but the body-politic, poisoning it like slow-acting arsenic. Didn't large-scale, pent-up resentments result in two World Wars, don't they even now trigger mass turmoil?

When 'celebs', especially male, break down in public, such as Cristiano Ronaldo or Novak Djokovic, derision is generally rained down upon them, as if Charles Dickens hadn't reprimanded, "Heaven knows we need never be ashamed of our tears, for they are rain upon the blinding dust of earth..." or Justin Timberlake wailed, "Cry me a river", unequivocally encouraging his brethren. Yet, strong women too are exhorted to never give in to such 'womanly' infirmity, or be forever stereotyped as 'the weaker sex'. Growing up in a house full of stern women, I was taught not to snivel (even the sound of words that denote crying repel!). Learning to walk in infancy, I already knew I should hold back the tears when I fell and scraped my knee. My formidable foremothers intended to build character, but I wonder now if they would have stood me in better stead by allowing me to express anguish.

SubQuestion No : 19

Q.19 According to the writer who among the following openly supports weeping?

- Ans** ✓ 1. Justin Timberlake
✗ 2. Novak Djokovic
✗ 3. Cristiano Ronaldo
✗ 4. Charles Dickens

Question ID : 630680896222
Option 1 ID : 6306803510901
Option 2 ID : 6306803510902
Option 3 ID : 6306803510900
Option 4 ID : 6306803510899

Comprehension:

Read the following passage and answer the questions.

Crying over spilt milk is futile. Crocodile tears are fake and manipulative. Crying wolf too is false, and dangerous. Indulging in any of the above would be a 'crying shame'; the most reprehensible behaviour. And those blubbing Everly Brothers? Leave 'em to their cryin' in the rain! There's no place in polite society for exposure that private. Nothing good's ever said about shedding a tear; our intrinsically human emissions of joy, sadness, and frustration. Because nothing good can come of it, or so we've been convinced.

The patriarchy comes down hard on weeping. 'Big boys don't cry' they command, insisting lads 'man up' and plough on amidst upheavals, without examination or even acknowledgement of their emotions. Our dammed-up waterworks then trickle into every niche and crevice, not just of our bodies but the body-politic, poisoning it like slow-acting arsenic. Didn't large-scale, pent-up resentments result in two World Wars, don't they even now trigger mass turmoil?

When 'celebs', especially male, break down in public, such as Cristiano Ronaldo or Novak Djokovic, derision is generally rained down upon them, as if Charles Dickens hadn't reprimanded, "Heaven knows we need never be ashamed of our tears, for they are rain upon the blinding dust of earth..." or Justin Timberlake wailed, "Cry me a river", unequivocally encouraging his brethren. Yet, strong women too are exhorted to never give in to such 'womanly' infirmity, or be forever stereotyped as 'the weaker sex'. Growing up in a house full of stern women, I was taught not to snivel (even the sound of words that denote crying repel!). Learning to walk in infancy, I already knew I should hold back the tears when I fell and scraped my knee. My formidable foremothers intended to build character, but I wonder now if they would have stood me in better stead by allowing me to express anguish.

SubQuestion No : 20

Q.20 The most suitable title for this passage is

- Ans 1. Strong people do not cry
 2. Crying: is it good or bad?
 3. Views of great writers on crying
 4. Crying makes everyone sad

Question ID : 630680896221
Option 1 ID : 6306803510895
Option 2 ID : 6306803510897
Option 3 ID : 6306803510898
Option 4 ID : 6306803510896

Section : Test of Hindi Language and Comprehension

Q.1 'रात्रि' के पर्याय से वाक्य का रिक्त स्थान पूर्ण करें—

बीती _____ जाग रही!

- Ans 1. दामिनी
 2. यती
 3. अर्कजा
 4. शर्वरी

Question ID : 630680896379
Option 1 ID : 6306803511493
Option 2 ID : 6306803511492
Option 3 ID : 6306803511494
Option 4 ID : 6306803511491

Q.2 सर्वोचित क्रिया-विशेषण शब्द से वाक्य का रिक्त स्थान पूर्ण करें-

ठंड बहुत है रात में इस तरह _____ न घूमों घर में बैठो।

- Ans 1. इधर-उधर
 2. बाहर-भीतर
 3. उधर-जिधर
 4. तले-ऊपर

Question ID : 630680896371
 Option 1 ID : 6306803511459
 Option 2 ID : 6306803511461
 Option 3 ID : 6306803511460
 Option 4 ID : 6306803511462

Q.3 निम्न में से वाक्य विन्यास की दृष्टि से शुद्ध वाक्य का चयन कीजिए--

- Ans 1. कविता में प्रकृति चित्रण मिलता है सौंदर्य का प्रतिमान बनकर हर कवि की।
 2. मिलता है हर कवि की कविता में प्रकृति चित्रण सौंदर्य का प्रतिमान बनकर।
 3. प्रकृति चित्रण मिलता है सौंदर्य का प्रतिमान बनकर हर कवि की कविता में।
 4. सौंदर्य का प्रतिमान बनकर हर कवि की कविता में प्रकृति चित्रण मिलता है।

Question ID : 630680896366
 Option 1 ID : 6306803511442
 Option 2 ID : 6306803511441
 Option 3 ID : 6306803511440
 Option 4 ID : 6306803511439

Q.4 दिए गए वाक्य में वर्तनी की दृष्टि से अशुद्ध शब्द की पहचान करें--

कार्यालय के समारोह में आपकी उपस्थिति वांक्षनीय है।

- Ans 1. वांक्षनीय
 2. समारोह
 3. कार्यालय
 4. पस्थिति

Question ID : 630680896377
 Option 1 ID : 6306803511486
 Option 2 ID : 6306803511484
 Option 3 ID : 6306803511483
 Option 4 ID : 6306803511485

Q.5 सर्वोचित विशेषण शब्द से वाक्य का रिक्त स्थान पूर्ण करें-

कुछ भी _____ करने से पहले सौ बार सोचना चाहिए।

- Ans
- 1. आगामी
 - 2. झूठा
 - 3. अनुचित
 - 4. मोटा

Question ID : 630680896370
Option 1 ID : 6306803511458
Option 2 ID : 6306803511455
Option 3 ID : 6306803511457
Option 4 ID : 6306803511456

Q.6 दिए गए वाक्य में वर्तनी की दृष्टि से अशुद्ध शब्द की पहचान करें-

दिपिका वर्तमान समय की प्रसिद्ध अभिनेत्री है।

- Ans
- 1. प्रसिद्ध
 - 2. वर्तमान
 - 3. अभिनेत्री
 - 4. दिपिका

Question ID : 630680896376
Option 1 ID : 6306803511481
Option 2 ID : 6306803511480
Option 3 ID : 6306803511482
Option 4 ID : 6306803511479

Q.7 निम्न में से वाक्य विन्यास की दृष्टि से शुद्ध वाक्य का चयन कीजिए-

- Ans
- 1. कहते हैं मूल्य आचरण के सिद्धांतों को जो हमारी नैतिकता व परम्परा का विवेचन करते हैं।
 - 2. कहते हैं मूल्य आचरण के सिद्धांतों को जो हमारी नैतिकता व परम्परा का करते हैं विवेचन।
 - 3. मूल्य आचरण के सिद्धांतों को कहते हैं हमारी नैतिकता व परम्परा का विवेचन हैं करते जो।
 - 4. मूल्य आचरण के सिद्धांतों को कहते हैं जो हमारी नैतिकता व परम्परा का विवेचन करते हैं।

Question ID : 630680896367
Option 1 ID : 6306803511443
Option 2 ID : 6306803511446
Option 3 ID : 6306803511445
Option 4 ID : 6306803511444

Q.8 निम्न में से वाक्य विन्यास की दृष्टि से शुद्ध वाक्य का चयन कीजिए:-

- Ans
- 1. संस्कृति व्यक्ति की गरिमा को प्रतिष्ठा प्रदान कर बंधुता का भाव प्रकट करती है।
 - 2. बंधुता का प्रकट करती है भाव संस्कृति व्यक्ति की गरिमा को प्रतिष्ठा प्रदान कर।
 - 3. भाव प्रकट बंधुता का करती है संस्कृति व्यक्ति की गरिमा को प्रतिष्ठा प्रदान कर।
 - 4. बंधुता का भाव प्रकट करती है संस्कृति व्यक्ति की गरिमा को प्रतिष्ठा प्रदान कर।

Question ID : 630680896368
Option 1 ID : 6306803511450
Option 2 ID : 6306803511449
Option 3 ID : 6306803511448
Option 4 ID : 6306803511447

Q.9 'मोम होना' मुहावरे का अर्थ होगा--

- Ans
- 1. दुर्बल होना
 - 2. कमज़ोर होना
 - 3. दयार्द्र होना
 - 4. चिकना होना

Question ID : 630680896372
 Option 1 ID : 6306803511463
 Option 2 ID : 6306803511465
 Option 3 ID : 6306803511464
 Option 4 ID : 6306803511466

Q.10 दिए गए वाक्य में वर्तनी की दृष्टि से अशुद्ध शब्द की पहचान करें--

चंद्रमा की ज्योतसना में आज कुछ भिन्न ही उज्ज्वलता है।

- Ans
- 1. उज्ज्वलता
 - 2. भिन्न
 - 3. ज्योतसना
 - 4. चंद्रमा

Question ID : 630680896375
 Option 1 ID : 6306803511478
 Option 2 ID : 6306803511477
 Option 3 ID : 6306803511476
 Option 4 ID : 6306803511475

Q.11 'होनहार बिरवान के होत चीकने पात' लोकोक्ति का अर्थ होगा--

- Ans
- 1. होनहार के लक्षण पहले से ही दिखायी पड़ने लगते हैं।
 - 2. होनी को कोई नहीं टाल सकता वो होकर रहती है।
 - 3. बुद्धिमान लोगों के पैर सुंदर होते हैं।
 - 4. बरगद के पेड़ के नये पत्ते चिकने होते हैं।

Question ID : 630680896373
 Option 1 ID : 6306803511468
 Option 2 ID : 6306803511470
 Option 3 ID : 6306803511469
 Option 4 ID : 6306803511467

Q.12 'लाली मिला हुआ काला रंग' के लिए सर्वोचित एक शब्द होगा--

- Ans
- 1. ऊदा
 - 2. रानी
 - 3. नीला
 - 4. नारंगी

Question ID : 630680896369
 Option 1 ID : 6306803511451
 Option 2 ID : 6306803511454
 Option 3 ID : 6306803511453
 Option 4 ID : 6306803511452

Q.13 'बाण' के पर्याय से वाक्य का रिक्त स्थान पूर्ण करें—

नायिका ने अपने नैनों के _____ चलाकर नायक को परास्त कर दिया।

- Ans
- 1. झष
 - 2. शर
 - 3. द्रुम
 - 4. नग

Question ID : 630680896378
Option 1 ID : 6306803511489
Option 2 ID : 6306803511487
Option 3 ID : 6306803511488
Option 4 ID : 6306803511490

Q.14 'उतर गई लोई तो क्या करेगा कोई' लोकोक्ति का अर्थ होगा--

- Ans
- 1. दिखावे से सुंदरता नहीं बढ़ती
 - 2. जब इज़्ज़त ही नहीं है तो डर किसका
 - 3. झूठ बहुत दिन छिपा नहीं रह सकता
 - 4. बुरे समय पर कोई सहायता नहीं करता

Question ID : 630680896374
Option 1 ID : 6306803511474
Option 2 ID : 6306803511471
Option 3 ID : 6306803511473
Option 4 ID : 6306803511472

Q.15 'कर्मठ' के विलोम से वाक्य पूर्ण करें—

तुम इतने _____ क्यों हो, जीवन में कुछ तो करो।

- Ans
- 1. अनुदात्त
 - 2. अकर्ममण्य
 - 3. निष्कर्म
 - 4. निश्चल

Question ID : 630680896380
Option 1 ID : 6306803511498
Option 2 ID : 6306803511496
Option 3 ID : 6306803511495
Option 4 ID : 6306803511497

Comprehension:

दिए गए गद्यांश के आधार पर प्रश्न के उत्तर दें—

आदिवासियों के विद्रोहों में संथालों का विद्रोह सबसे ज़बरदस्त था। भागलपुर से राजमहल के बीच का क्षेत्र दामन-ए-कोह के नाम से जाना जाता था। यहाँ हज़ारों संथालों ने संगठित विद्रोह किया। ज़मींदार, पुलिस, राजस्व विभाग और अदालतों ने संथालों पर बेइतहा जुल्म ढाए। संथालों को कर्ज़ देकर 50 से 500 फीसदी की दर से ब्याज़ वसूला जाता था। 1854 के आते-आते आदिवासी कसमसाने लगे। आदिवासियों के मुखिया मजलिस और परगणित बैठकें करने लगे और तैयारी शुरू हो गई खुले विद्रोह की। इनमें एक स्वर से निर्णय किया गया कि बाहरी लोगों को भगाने, विदेशियों का राज हमेशा के लिए खत्म कर सतयुग का राज – न्याय और धर्म पर अपना राज – स्थापित करने के लिए खुला विद्रोह किया जाए। संथालों को विश्वास था कि भगवान् उनके साथ है। विद्रोही आदिवासियों के दो प्रमुख नेता सीदो और कान्हू थे। इन्होंने घोषणा की कि ठाकुरजी (भगवान) ने उन्हें निर्देश दिया है कि आज़ादी के लिए अब हथियार उठा लो। विदोहियों ने महाजनों और ज़मींदारों पर हमला बोलना शुरू किया। उनके मकान जला डाले। लगभग उन सभी चीज़ों पर हमला किया, जो दिक्कू (गैर-आदिवासी) और उपनिवेशवादी सत्ता के शोषण के माध्यम थे।

SubQuestion No : 16

Q.16 'दामन-ए-कोह' क्या था?

- Ans 1. एक विस्तृत क्षेत्र का नाम
 2. एक शहर का नाम
 3. एक जाति का नाम
 4. एक आंदोलन का नाम

Question ID : 630680896382
 Option 1 ID : 6306803511500
 Option 2 ID : 6306803511499
 Option 3 ID : 6306803511501
 Option 4 ID : 6306803511502

Comprehension:

दिए गए गद्यांश के आधार पर प्रश्न के उत्तर दें—

आदिवासियों के विद्रोहों में संथालों का विद्रोह सबसे ज़बरदस्त था। भागलपुर से राजमहल के बीच का क्षेत्र दामन-ए-कोह के नाम से जाना जाता था। यहाँ हज़ारों संथालों ने संगठित विद्रोह किया। ज़मींदार, पुलिस, राजस्व विभाग और अदालतों ने संथालों पर बेइतहा जुल्म ढाए। संथालों को कर्ज़ देकर 50 से 500 फीसदी की दर से ब्याज़ वसूला जाता था। 1854 के आते-आते आदिवासी कसमसाने लगे। आदिवासियों के मुखिया मजलिस और परगणित बैठकें करने लगे और तैयारी शुरू हो गई खुले विद्रोह की। इनमें एक स्वर से निर्णय किया गया कि बाहरी लोगों को भगाने, विदेशियों का राज हमेशा के लिए खत्म कर सतयुग का राज – न्याय और धर्म पर अपना राज – स्थापित करने के लिए खुला विद्रोह किया जाए। संथालों को विश्वास था कि भगवान् उनके साथ है। विद्रोही आदिवासियों के दो प्रमुख नेता सीदो और कान्हू थे। इन्होंने घोषणा की कि ठाकुरजी (भगवान) ने उन्हें निर्देश दिया है कि आज़ादी के लिए अब हथियार उठा लो। विदोहियों ने महाजनों और ज़मींदारों पर हमला बोलना शुरू किया। उनके मकान जला डाले। लगभग उन सभी चीज़ों पर हमला किया, जो दिक्कू (गैर-आदिवासी) और उपनिवेशवादी सत्ता के शोषण के माध्यम थे।

SubQuestion No : 17

Q.17 गद्यांश के लिए सर्वोपयुक्त शीर्षक होगा-

- Ans 1. सीदो-कान्हू विद्रोह
 2. जाति विद्रोह
 3. आदिवासी विद्रोह
 4. संथाल विद्रोह

Question ID : 630680896383
 Option 1 ID : 6306803511505
 Option 2 ID : 6306803511504
 Option 3 ID : 6306803511503
 Option 4 ID : 6306803511506

Comprehension:

दिए गए गद्यांश के आधार पर प्रश्न के उत्तर दें—

आदिवासियों के विद्रोहों में संथालों का विद्रोह सबसे ज़बरदस्त था। भागलपुर से राजमहल के बीच का क्षेत्र दामन-ए-कोह के नाम से जाना जाता था। यहाँ हज़ारों संथालों ने संगठित विद्रोह किया। ज़मींदार, पुलिस, राजस्व विभाग और अदालतों ने संथालों पर बेइंतहा जुल्म ढाए। संथालों को कर्ज़ देकर 50 से 500 फीसदी की दर से ब्याज़ वसूला जाता था। 1854 के आते-आते आदिवासी कसमसाने लगे। आदिवासियों के मुखिया मजलिस और परगणित बैठकें करने लगे और तैयारी शुरू हो गई खुले विद्रोह की। इनमें एक स्वर से निर्णय किया गया कि बाहरी लोगों को भगाने, विदेशियों का राज हमेशा के लिए खत्म कर सतयुग का राज – न्याय और धर्म पर अपना राज – स्थापित करने के लिए खुला विद्रोह किया जाए। संथालों को विश्वास था कि भगवान् उनके साथ है। विद्रोही आदिवासियों के दो प्रमुख नेता सीदो और कान्हू थे। इन्होंने घोषणा की कि ठाकुरजी (भगवान) ने उन्हें निर्देश दिया है कि आज़ादी के लिए अब हथियार उठा लो। विद्रोहियों ने महाजनों और ज़मींदारों पर हमला बोलना शुरू किया। उनके मकान जला डाले। लगभग उन सभी चीज़ों पर हमला किया, जो दिक्कू (गैर-आदिवासी) और उपनिवेशवादी सत्ता के शोषण के माध्यम थे।

SubQuestion No : 18

Q.18 गद्यांश के अनुसार विद्रोह का अभिष्ट नहीं था--

- Ans
- 1. अत्यधिक ब्याज़ पर अंकुश
 - 2. गैर आदिवासियों का निष्कासन
 - 3. न्याय और धर्म के राज की स्थापना
 - 4. धर्म के वर्चस्व की समाप्ति

Question ID : 630680896385
Option 1 ID : 6306803511513
Option 2 ID : 6306803511511
Option 3 ID : 6306803511512
Option 4 ID : 6306803511514

Comprehension:

दिए गए गद्यांश के आधार पर प्रश्न के उत्तर दें—

आदिवासियों के विद्रोहों में संथालों का विद्रोह सबसे ज़बरदस्त था। भागलपुर से राजमहल के बीच का क्षेत्र दामन-ए-कोह के नाम से जाना जाता था। यहाँ हज़ारों संथालों ने संगठित विद्रोह किया। ज़मींदार, पुलिस, राजस्व विभाग और अदालतों ने संथालों पर बेइंतहा जुल्म ढाए। संथालों को कर्ज़ देकर 50 से 500 फीसदी की दर से ब्याज़ वसूला जाता था। 1854 के आते-आते आदिवासी कसमसाने लगे। आदिवासियों के मुखिया मजलिस और परगणित बैठकें करने लगे और तैयारी शुरू हो गई खुले विद्रोह की। इनमें एक स्वर से निर्णय किया गया कि बाहरी लोगों को भगाने, विदेशियों का राज हमेशा के लिए खत्म कर सतयुग का राज – न्याय और धर्म पर अपना राज – स्थापित करने के लिए खुला विद्रोह किया जाए। संथालों को विश्वास था कि भगवान् उनके साथ है। विद्रोही आदिवासियों के दो प्रमुख नेता सीदो और कान्हू थे। इन्होंने घोषणा की कि ठाकुरजी (भगवान) ने उन्हें निर्देश दिया है कि आज़ादी के लिए अब हथियार उठा लो। विद्रोहियों ने महाजनों और ज़मींदारों पर हमला बोलना शुरू किया। उनके मकान जला डाले। लगभग उन सभी चीज़ों पर हमला किया, जो दिक्कू (गैर-आदिवासी) और उपनिवेशवादी सत्ता के शोषण के माध्यम थे।

SubQuestion No : 19

Q.19 गद्यांश में वर्णित विद्रोह के संदर्भ में असत्य है--

- Ans
- 1. सीदो और कान्हू इस विद्रोह के मुख्य नेता थे।
 - 2. यह विद्रोह भागलपुर से राजमहल के बीच के क्षेत्र में हुआ।
 - 3. विद्रोहियों ने महाजनों और ज़मींदारों को अपना निशाना बनाया।
 - 4. इस विद्रोह में धार्मिकता को स्थान नहीं दिया गया था।

Question ID : 630680896386
Option 1 ID : 6306803511516
Option 2 ID : 6306803511515
Option 3 ID : 6306803511517
Option 4 ID : 6306803511518

Comprehension:

दिए गए गद्यांश के आधार पर प्रश्न के उत्तर दें-

आदिवासियों के विद्रोहों में संथालों का विद्रोह सबसे ज़बरदस्त था। भागलपुर से राजमहल के बीच का क्षेत्र दामन-ए-कोह के नाम से जाना जाता था। यहाँ हज़ारों संथालों ने संगठित विद्रोह किया। ज़मींदार, पुलिस, राजस्व विभाग और अदालतों ने संथालों पर बेइंतहा जुल्म ढाए। संथालों को कर्ज़ देकर 50 से 500 फीसदी की दर से ब्याज़ वसूला जाता था। 1854 के आते-आते आदिवासी कसमसाने लगे। आदिवासियों के मुखिया मजलिस और परगणित बैठकें करने लगे और तैयारी शुरू हो गई खुले विद्रोह की। इनमें एक स्वर से निर्णय किया गया कि बाहरी लोगों को भगाने, विदेशियों का राज हमेशा के लिए खत्म कर सतयुग का राज - न्याय और धर्म पर अपना राज - स्थापित करने के लिए खुला विद्रोह किया जाए। संथालों को विश्वास था कि भगवान् उनके साथ है। विद्रोही आदिवासियों के दो प्रमुख नेता सीदो और कान्हू थे। इन्होंने घोषणा की कि ठाकुरजी (भगवान) ने उन्हें निर्देश दिया है कि आज़ादी के लिए अब हथियार उठा लो। विदोहियों ने महाजनों और ज़मींदारों पर हमला बोलना शुरू किया। उनके मकान जला डाले। लगभग उन सभी चीज़ों पर हमला किया, जो दिक्कू (गैर-आदिवासी) और उपनिवेशवादी सत्ता के शोषण के माध्यम थे।

SubQuestion No : 20

Q.20 'मजलिस' शब्द का अर्थ है--

- Ans
- 1. समारोह
 - 2. सभा
 - 3. संगोष्ठी
 - 4. भाषण

Question ID : 630680896384
Option 1 ID : 6306803511510
Option 2 ID : 6306803511507
Option 3 ID : 6306803511508
Option 4 ID : 6306803511509

Section : Discipline1

Q.1 Find out the statement which is not correct about the nature of learning.

- Ans
- 1. Learning is purposive or goal directed
 - 2. Learning is a process and not a product
 - 3. Learning is permanent and cannot be reversed
 - 4. Learning is universal and continuous

Question ID : 630680896559
Option 1 ID : 6306803512204
Option 2 ID : 6306803512203
Option 3 ID : 6306803512205
Option 4 ID : 6306803512206

Q.2 Which Indian act takes care of providing education, employment, creation of barrier free environment, social security etc. of persons with disabilities

- Ans
- 1. RCI Act 1992
 - 2. RPWD Act- 2016
 - 3. RTE Act- 2009
 - 4. The Mental Health Act- 1987

Question ID : 630680896568
Option 1 ID : 6306803512240
Option 2 ID : 6306803512242
Option 3 ID : 6306803512241
Option 4 ID : 6306803512239

Q.3 बच्चा भाषा के छोटे-सरल वाक्य कब बोलना शुरू करता है?

- Ans
- 1. 11 महीने में
 - 2. 2 साल में
 - 3. 4 साल में
 - 4. 3 साल में

Question ID : 630680896564
Option 1 ID : 6306803512223
Option 2 ID : 6306803512224
Option 3 ID : 6306803512226
Option 4 ID : 6306803512225

Q.4 Assertion (A): Educational evaluation is carried out from time to time.
Reason (R): Through evaluation reliable decisions about educational planning is made.

- Ans
- 1. A is true but R is false.
 - 2. Both A and R are true but R is not the correct explanation of A.
 - 3. Both A and R are true and R is the correct explanation of A.
 - 4. Both A and R are false.

Question ID : 630680896560
Option 1 ID : 6306803512209
Option 2 ID : 6306803512208
Option 3 ID : 6306803512207
Option 4 ID : 6306803512210

Q.5 Primary language or the mother tongue of the child is extensively used in this method of teaching English language-

- Ans
- 1. Audio-lingual method
 - 2. Total Physical Response
 - 3. Direct method
 - 4. Grammar translation method

Question ID : 630680896565
Option 1 ID : 6306803512228
Option 2 ID : 6306803512230
Option 3 ID : 6306803512227
Option 4 ID : 6306803512229

Q.6 Adolescence is the transitional phase of growth and development between _____ and _____.

- Ans
- 1. Toddlerhood, middle childhood
 - 2. Infancy, early childhood
 - 3. Childhood, adulthood
 - 4. Early childhood, later childhood

Question ID : 630680896558
Option 1 ID : 6306803512201
Option 2 ID : 6306803512199
Option 3 ID : 6306803512202
Option 4 ID : 6306803512200

Q.7 Which statement is not correct with regard to inclusive education?

- Ans
- 1. Specialized classrooms and schools for children with special needs.
 - 2. Inclusive education means all children in the same classrooms, in the same schools.
 - 3. Real learning opportunities for groups who have traditionally been excluded.
 - 4. Learning opportunities not only to children with disabilities, but speakers of minority languages too.

Question ID : 630680896566
Option 1 ID : 6306803512231
Option 2 ID : 6306803512232
Option 3 ID : 6306803512233
Option 4 ID : 6306803512234

Q.8 Pictorial presentation which involves children interpreting pictures and to find relevant information and solutions to mathematical problems are techniques of teaching preferably adopted to teach students at

- Ans
- 1. Secondary level
 - 2. Elementary level
 - 3. Pre-primary level
 - 4. Primary level

Question ID : 630680896562
Option 1 ID : 6306803512218
Option 2 ID : 6306803512217
Option 3 ID : 6306803512215
Option 4 ID : 6306803512216

Q.9 Which among the following statement is not correct?

- Ans
- 1. Development is a process that starts even before birth
 - 2. Development refers to both quantitative and qualitative changes
 - 3. Development has a static nature
 - 4. Developmental changes are systematic

Question ID : 630680896557
Option 1 ID : 6306803512198
Option 2 ID : 6306803512195
Option 3 ID : 6306803512196
Option 4 ID : 6306803512197

Q.10 Our visual system mainly consists of three components namely-

- Ans
- 1. Eyes, optic nerves and sensory nerves
 - 2. Eyes, optic nerves and light
 - 3. Eyes, sensory nerves and brain
 - 4. Eyes, optic nerves and brain

Question ID : 630680896572
Option 1 ID : 6306803512257
Option 2 ID : 6306803512258
Option 3 ID : 6306803512255
Option 4 ID : 6306803512256

Q.11 A testing procedure for the formal assessment of the hearing losses is known as?

- Ans 1. Audiometry
 2. Audiometer
 3. Audiobook
 4. Audiogram

Question ID : 630680896571
Option 1 ID : 6306803512251
Option 2 ID : 6306803512252
Option 3 ID : 6306803512254
Option 4 ID : 6306803512253

Q.12 Which among the following is not one of the factors causing learning disabilities?

- Ans 1. Environmental factors
 2. Economic factors
 3. Physiological factors
 4. Heredity factors

Question ID : 630680896575
Option 1 ID : 6306803512270
Option 2 ID : 6306803512269
Option 3 ID : 6306803512268
Option 4 ID : 6306803512267

Q.13 Which among the following is not true about Demonstration Method?

- Ans 1. Demonstration method is an activity-centered method.
 2. Demonstration is used frequently in a science classroom.
 3. Demonstration helps learners to learn through observation.
 4. Demonstration is a learner-centric method of teaching.

Question ID : 630680896561
Option 1 ID : 6306803512213
Option 2 ID : 6306803512214
Option 3 ID : 6306803512211
Option 4 ID : 6306803512212

Q.14 A tactile system of reading and writing which is devised for visually impaired children is known as-

- Ans 1. Braille
 2. Talking book
 3. Electronic reader
 4. Audiobook

Question ID : 630680896574
Option 1 ID : 6306803512266
Option 2 ID : 6306803512264
Option 3 ID : 6306803512265
Option 4 ID : 6306803512263

Q.15 Ophthalmology is associated with-

- Ans
- 1. Speech disorders
 - 2. Hearing disorders
 - 3. Visual disorders
 - 4. Mental disorders

Question ID : 630680896573
Option 1 ID : 6306803512260
Option 2 ID : 6306803512259
Option 3 ID : 6306803512261
Option 4 ID : 6306803512262

Q.16 The Right to Education Act provides for the right to free and compulsory education to the children including children with special needs between the age group of-

- Ans
- 1. 4-16 years
 - 2. 4-14 years
 - 3. 6-16 years
 - 4. 6-14 years

Question ID : 630680896569
Option 1 ID : 6306803512245
Option 2 ID : 6306803512243
Option 3 ID : 6306803512246
Option 4 ID : 6306803512244

Q.17 What is the term used to describe the phenomenon of various social structures, belief systems, rituals, and ways of living co-existing within a single geopolitical setting?

- Ans
- 1. Socio-cultural diversity
 - 2. Assimilation
 - 3. Cultural homogeneity
 - 4. Ethnocentrism

Question ID : 630680896567
Option 1 ID : 6306803512237
Option 2 ID : 6306803512236
Option 3 ID : 6306803512235
Option 4 ID : 6306803512238

Q.18 Under which scheme, children with severe disability can be educated within home-based and alternate educational settings to enable them to achieve independent living skills?

- Ans
- 1. Right to Education Act
 - 2. Sarva Shiksha Abhiyan
 - 3. Inclusive Education for Disabled at Secondary Stage
 - 4. Rashtriya Madhyamik Shiksha Abhiyan

Question ID : 630680896570
Option 1 ID : 6306803512247
Option 2 ID : 6306803512249
Option 3 ID : 6306803512248
Option 4 ID : 6306803512250

Q.19 Documentaries, museums, artifacts, archives, timelines are some of the resources to teach _____ effectively to social science students.

- Ans 1. History
 2. Economics
 3. Political science
 4. Geography

Question ID : 630680896563
 Option 1 ID : 6306803512222
 Option 2 ID : 6306803512219
 Option 3 ID : 6306803512220
 Option 4 ID : 6306803512221

Q.20 The period of trust vs. mistrust has appeared in which developmental theory?

- Ans 1. Psychological development theory
 2. Emotional development theory
 3. Psycho-social development theory
 4. Socio-cultural development theory

Question ID : 630680896556
 Option 1 ID : 6306803512191
 Option 2 ID : 6306803512192
 Option 3 ID : 6306803512194
 Option 4 ID : 6306803512193

Section : Discipline2

Q.1 What is a key component for successful inclusion in early years education?

- Ans 1. Excluding children with disabilities from assessment
 2. Limited accessibility to early learning environments
 3. Flexible curriculum and accessible environment
 4. Rigid curriculum

Question ID : 630680896590
 Option 1 ID : 6306803512330
 Option 2 ID : 6306803512329
 Option 3 ID : 6306803512328
 Option 4 ID : 6306803512327

Q.2 What is the primary focus of Applied Behavioral Analysis (ABA)?

- Ans 1. Positive reinforcement
 2. Pharmacological interventions
 3. Negative reinforcement
 4. Cognitive principles

Question ID : 630680896592
 Option 1 ID : 6306803512337
 Option 2 ID : 6306803512338
 Option 3 ID : 6306803512335
 Option 4 ID : 6306803512336

Q.3 Autistic children are found to share many characteristics with the following except-

- Ans
- 1. Fragile X Syndrome
 - 2. Emotional disturbance
 - 3. Hypertension
 - 4. Mental retardation

Question ID : 630680896582
Option 1 ID : 6306803512297
Option 2 ID : 6306803512296
Option 3 ID : 6306803512298
Option 4 ID : 6306803512295

Q.4 Which among the following factor causing multiple disabilities in children is not associated at the time of the birth?

- Ans
- 1. Perinatal hemorrhage
 - 2. Oxygen deprivation
 - 3. Premature birth
 - 4. Postnatal trauma

Question ID : 630680896586
Option 1 ID : 6306803512313
Option 2 ID : 6306803512311
Option 3 ID : 6306803512312
Option 4 ID : 6306803512314

Q.5 From the given options, which one is not a testing device to identify learning disabled child?

- Ans
- 1. Diagnostic test
 - 2. Observation
 - 3. Ability test
 - 4. Daily assessment system

Question ID : 630680896576
Option 1 ID : 6306803512272
Option 2 ID : 6306803512271
Option 3 ID : 6306803512273
Option 4 ID : 6306803512274

Q.6 According to applied behavior analysis, what is the first step in treating inappropriate behavior?

- Ans
- 1. Providing intensive trial training
 - 2. Identifying alternative behaviors.
 - 3. Implementing behavior modification techniques
 - 4. Analyze the behavior of affected child in his environment.

Question ID : 630680896593
Option 1 ID : 6306803512342
Option 2 ID : 6306803512339
Option 3 ID : 6306803512341
Option 4 ID : 6306803512340

Q.7 What type of method is typically prescribed and adopted in preschool education?

- Ans 1. Play way method
 2. Rote learning method
 3. Formal teaching method
 4. Lecture-based method

Question ID : 630680896591
 Option 1 ID : 6306803512333
 Option 2 ID : 6306803512331
 Option 3 ID : 6306803512334
 Option 4 ID : 6306803512332

Q.8 Which among the following is not an appropriate technique helping the learning-disabled child?

- Ans 1. Mnemonic device
 2. Individualized instructions
 3. Instructor-centered approach
 4. Technological approach

Question ID : 630680896578
 Option 1 ID : 6306803512279
 Option 2 ID : 6306803512281
 Option 3 ID : 6306803512282
 Option 4 ID : 6306803512280

Q.9 What is the correct sequence of steps involved in applied behavior analysis?

- Ans 1. Analyze the behavior of child, Shaping appropriate behavior, Identifying alternative behaviors.
 2. Identifying alternative behaviors, Analyze the behavior of child, Shaping appropriate behavior.
 3. Analyze the behavior of child, Identifying alternative behaviors, Shaping appropriate behavior.
 4. Shaping appropriate behavior, Identifying alternative behaviors, Analyze the behavior of child.

Question ID : 630680896595
 Option 1 ID : 6306803512348
 Option 2 ID : 6306803512347
 Option 3 ID : 6306803512350
 Option 4 ID : 6306803512349

Q.10 ADHD stands for-

- Ans 1. Attention Deficiency Hyperactivity Disorder
 2. Attention Disorder of Hyperactivity Deficiency
 3. Attention Deficit Hyperactivity Disorder
 4. Attention Deficit Hypersensitivity Disorder

Question ID : 630680896579
 Option 1 ID : 6306803512286
 Option 2 ID : 6306803512283
 Option 3 ID : 6306803512284
 Option 4 ID : 6306803512285

Q.11 What is a crucial consideration for counselors working with gifted children?

- Ans
- 1. Assuming conventional counseling methods suffice.
 - 2. Overlooking the etiology of the child's problem.
 - 3. Identifying psychiatric symptoms and diagnostic categories.
 - 4. Understanding the delicacy of giftedness and having a strong theoretical base.

Question ID : 630680896588
Option 1 ID : 6306803512319
Option 2 ID : 6306803512320
Option 3 ID : 6306803512321
Option 4 ID : 6306803512322

Q.12 Adaptive chairs, standers, side-lyers and standing frames are some of the assistive technologies used by persons with-

- Ans
- 1. Hearing disabilities
 - 2. Speech disabilities
 - 3. Motor disabilities
 - 4. ADHD

Question ID : 630680896584
Option 1 ID : 6306803512303
Option 2 ID : 6306803512305
Option 3 ID : 6306803512304
Option 4 ID : 6306803512306

Q.13 Which type of guidance focuses on assisting individuals in choosing, preparing for, entering, and progressing in their chosen occupation or career?

- Ans
- 1. Vocational Guidance
 - 2. Personal-Social Guidance
 - 3. Educational Guidance
 - 4. Study Skills Training

Question ID : 630680896587
Option 1 ID : 6306803512317
Option 2 ID : 6306803512316
Option 3 ID : 6306803512315
Option 4 ID : 6306803512318

Q.14 Written language disorder related with mechanical writing skill of an individual is known as-

- Ans
- 1. Dyslexia
 - 2. Dysnomia
 - 3. Dyscalculia
 - 4. Dysgraphia

Question ID : 630680896577
Option 1 ID : 6306803512275
Option 2 ID : 6306803512278
Option 3 ID : 6306803512277
Option 4 ID : 6306803512276

Q.15 The primary source of AUTISM identification is -

- Ans 1. Parents/caregivers
 2. Pediatrician
 3. Doctors
 4. Teachers

Question ID : 630680896581
Option 1 ID : 6306803512293
Option 2 ID : 6306803512294
Option 3 ID : 6306803512291
Option 4 ID : 6306803512292

Q.16 Assertion (A): Cerebral Palsy is a condition in which the individual cannot exercise control over the movements of the body.

Reason (R): Faulty development of motor areas in the brain disrupts the brain's ability to control movement and posture adequately.

- Ans 1. Both A and R are true and R is the correct explanation of A.
 2. A is true but R is false.
 3. Both A and R are false.
 4. Both A and R are true but R is not the correct explanation of A.

Question ID : 630680896583
Option 1 ID : 6306803512299
Option 2 ID : 6306803512301
Option 3 ID : 6306803512302
Option 4 ID : 6306803512300

Q.17 What is the primary focus of educational accommodations for children with ADHD?

- Ans 1. Providing additional academic tutoring
 2. Altering the classroom environment to fit the child's needs
 3. Manipulating the child's behavior directly
 4. Implementing strict disciplinary measures

Question ID : 630680896589
Option 1 ID : 6306803512325
Option 2 ID : 6306803512324
Option 3 ID : 6306803512323
Option 4 ID : 6306803512326

Q.18 Alpha-feto protein test, sonography, MRI and Amniocentesis are some of the tests to identify multiple disabilities among children at-

- Ans 1. Early childhood
 2. Later childhood
 3. Pre-natal stage
 4. Post-natal stage

Question ID : 630680896585
Option 1 ID : 6306803512309
Option 2 ID : 6306803512310
Option 3 ID : 6306803512307
Option 4 ID : 6306803512308

Q.19 In which age group does the Lovass method's intensive intervention program primarily target?

- Ans
- 1. Adolescents
 - 2. Preschool-age children
 - 3. School-age children
 - 4. Young adults

Question ID : 630680896596
 Option 1 ID : 6306803512353
 Option 2 ID : 6306803512351
 Option 3 ID : 6306803512352
 Option 4 ID : 6306803512354

Q.20 Which among the following term is not associated with expressive language problems?

- Ans
- 1. Dysnomia
 - 2. Dysarthria
 - 3. Dysgraphia
 - 4. Apraxia

Question ID : 630680896580
 Option 1 ID : 6306803512287
 Option 2 ID : 6306803512289
 Option 3 ID : 6306803512290
 Option 4 ID : 6306803512288

Section : Discipline3

Q.1 When did the notion of community-based rehabilitation (CBR) emerge?

- Ans
- 1. 1978
 - 2. 2008
 - 3. 1998
 - 4. 1988

Question ID : 630680896598
 Option 1 ID : 6306803512359
 Option 2 ID : 6306803512362
 Option 3 ID : 6306803512361
 Option 4 ID : 6306803512360

Q.2 What is the primary mode of communication for sign languages?

- Ans
- 1. Through writing
 - 2. Through hands, eyes, and torso
 - 3. Through ears
 - 4. Through speaking

Question ID : 630680896612
 Option 1 ID : 6306803512415
 Option 2 ID : 6306803512418
 Option 3 ID : 6306803512416
 Option 4 ID : 6306803512417

Q.3 What are some benefits of community-based rehabilitation (CBR) programs?

- Ans
- 1. Limiting access to educational and vocational opportunities
 - 2. Decreasing independence and mobility
 - 3. Enhancing mobility, communication skills, and social inclusion for disabled individuals
 - 4. Increasing reliance on institutionalized care

Question ID : 630680896599
Option 1 ID : 6306803512364
Option 2 ID : 6306803512363
Option 3 ID : 6306803512366
Option 4 ID : 6306803512365

Q.4 Which device provides immediate hard copies of Braille text and allows for text insertion and proofreading before printing?

- Ans
- 1. Portable reading device
 - 2. Electronic Braille note-taker
 - 3. Tactile images
 - 4. Electronic Braille typewriter

Question ID : 630680896604
Option 1 ID : 6306803512385
Option 2 ID : 6306803512383
Option 3 ID : 6306803512384
Option 4 ID : 6306803512386

Q.5 How does orientation and mobility training benefit individuals with mobility challenges?

- Ans
- 1. By isolating them from community life and workforce
 - 2. By restricting their movement to prevent potential dangers
 - 3. By enhancing control over their environment and promoting independence
 - 4. By increasing dependence on others for daily routine activities

Question ID : 630680896606
Option 1 ID : 6306803512394
Option 2 ID : 6306803512392
Option 3 ID : 6306803512393
Option 4 ID : 6306803512391

Q.6 What type of assistive technology is often used to facilitate writing for individuals with physical impairments?

- Ans
- 1. Modified keyboard
 - 2. Advanced speech recognition software
 - 3. Virtual reality headsets
 - 4. Complex robotics

Question ID : 630680896603
Option 1 ID : 6306803512380
Option 2 ID : 6306803512382
Option 3 ID : 6306803512379
Option 4 ID : 6306803512381

Q.7 According to the social model of disability, what is considered the primary factor in determining disability?

- Ans
- 1. Genetic predispositions
 - 2. Social and environmental factors
 - 3. Access to medical treatments
 - 4. Personal health conditions

Question ID : 630680896601
Option 1 ID : 6306803512373
Option 2 ID : 6306803512374
Option 3 ID : 6306803512372
Option 4 ID : 6306803512371

Q.8 Assertion: Visually impaired individuals depend on senses other than sight for orientation.
Reasoning: They utilize their senses of hearing, touch, and smell to recognize obstacles and landmarks.

- Ans
- 1. Both Assertion and Reason are true, but Reason is not the correct explanation of the Assertion
 - 2. Both Assertion and Reason are true, and Reason is the correct explanation of the Assertion.
 - 3. Assertion is true, but Reason is false.
 - 4. Assertion is false, but Reason is true.

Question ID : 630680896605
Option 1 ID : 6306803512388
Option 2 ID : 6306803512387
Option 3 ID : 6306803512389
Option 4 ID : 6306803512390

Q.9 What is the primary purpose of the sighted guide technique for individuals with visual impairment?

- Ans
- 1. To increase dependence on the sighted companion for navigation
 - 2. To enhance communication and understanding between the visually impaired person and the guide
 - 3. To discourage the involvement of family members in guiding the visually impaired person
 - 4. To provide verbal instructions to the visually impaired person during walking

Question ID : 630680896607
Option 1 ID : 6306803512396
Option 2 ID : 6306803512397
Option 3 ID : 6306803512398
Option 4 ID : 6306803512395

Q.10 Which method of communication emphasizes the use of amplification and speech reading for students with hearing impairment?

- Ans**
- 1. Auditory verbal uni-sensory method
 - 2. Manual communication method
 - 3. Visual communication method
 - 4. Oral/Auditory-oral method

Question ID : 630680896611
Option 1 ID : 6306803512411
Option 2 ID : 6306803512413
Option 3 ID : 6306803512414
Option 4 ID : 6306803512412

Q.11 How has prosthetic technology advanced to assist individuals with hearing impairments?

- Ans**
- 1. By introducing mobility devices for physical support
 - 2. By developing cochlear implants and digital hearing aids
 - 3. By implementing cognitive enhancement tools
 - 4. By providing visual aids for communication

Question ID : 630680896602
Option 1 ID : 6306803512377
Option 2 ID : 6306803512375
Option 3 ID : 6306803512378
Option 4 ID : 6306803512376

Q.12 What does ISL stand for in the context of people with hearing impairment?

- Ans**
- 1. International Sign Language
 - 2. Inclusive Sign Language
 - 3. Interpreted Sign Language
 - 4. Indian Sign Language

Question ID : 630680896615
Option 1 ID : 6306803512427
Option 2 ID : 6306803512428
Option 3 ID : 6306803512430
Option 4 ID : 6306803512429

Q.13 What is essential to the daily living of persons with hearing difficulties?

- Ans**
- 1. Utilization of vision for communication, often through sign language
 - 2. Reliance on auditory communication
 - 3. Preference for oral communication over signed communication
 - 4. Emphasis on spoken English skills over sign language skills

Question ID : 630680896609
Option 1 ID : 6306803512404
Option 2 ID : 6306803512403
Option 3 ID : 6306803512405
Option 4 ID : 6306803512406

Q.14 What is the primary advantage of a folding cane compared to a long cane for visually impaired individuals?

- Ans
- 1. Folding canes are cheaper and more affordable
 - 2. Folding canes have a longer reach and better detection of obstacles
 - 3. Folding canes provide additional support for balance
 - 4. Folding canes can be easily stored in a bag while traveling

Question ID : 630680896608
Option 1 ID : 6306803512399
Option 2 ID : 6306803512402
Option 3 ID : 6306803512400
Option 4 ID : 6306803512401

Q.15 Assertion: Maintaining close proximity between a child with hearing impairment and the teacher is essential in inclusive classrooms.

Reason: Close proximity allows for better visual and auditory communication between the child and the teacher.

- Ans
- 1. Assertion is true, but Reason is false.
 - 2. Both Assertion and Reason are true, but Reason is not the correct explanation of the Assertion
 - 3. Both Assertion and Reason are true, and Reason is the correct explanation of the Assertion.
 - 4. Assertion is false, but Reason is true.

Question ID : 630680896610
Option 1 ID : 6306803512409
Option 2 ID : 6306803512408
Option 3 ID : 6306803512407
Option 4 ID : 6306803512410

Q.16 What is the primary objective of rehabilitation?

- Ans
- 1. To promote social stigma and exclusion
 - 2. To enable individuals to attain the highest possible level of positive health and achieve social integration
 - 3. To isolate individuals with disabilities from their communities
 - 4. To limit access to health services for people with disabilities

Question ID : 630680896597
Option 1 ID : 6306803512356
Option 2 ID : 6306803512358
Option 3 ID : 6306803512355
Option 4 ID : 6306803512357

Q.17 Who developed the widely used behavioral treatment method known as the Lovass method?

- Ans
- 1. Professor Marcus Lovass
 - 2. Professor Ivan Lovass
 - 3. Professor Adam Lovass
 - 4. Professor Elena Lovass

Question ID : 630680896594
Option 1 ID : 6306803512346
Option 2 ID : 6306803512343
Option 3 ID : 6306803512344
Option 4 ID : 6306803512345

Q.18 According to the World Federation of the Deaf (2012), what approach is becoming popular in educating deaf children?

- Ans
- 1. Exclusively using pantomime and gesture for communication
 - 2. Focusing solely on rhetoric and poetry in sign language
 - 3. Teaching only written language skills
 - 4. Adopting a bilingual approach with sign language as the teaching language

Question ID : 630680896613
Option 1 ID : 6306803512420
Option 2 ID : 6306803512422
Option 3 ID : 6306803512419
Option 4 ID : 6306803512421

Q.19 What advantage does sign language offer in schools?

- Ans
- 1. It limits the transmission of knowledge and information
 - 2. It hinders the learning process
 - 3. It enhances the communication process
 - 4. It reduces cognitive skills in students

Question ID : 630680896614
Option 1 ID : 6306803512426
Option 2 ID : 6306803512423
Option 3 ID : 6306803512424
Option 4 ID : 6306803512425

Q.20 What distinguishes inclusive education?

- Ans
- 1. Offering additional support only to students with higher academic abilities
 - 2. Providing separate education programs for marginalized students
 - 3. Excluding students with special needs from general education classes
 - 4. Enrolling students with special needs in general education classes

Question ID : 630680896600
Option 1 ID : 6306803512370
Option 2 ID : 6306803512368
Option 3 ID : 6306803512367
Option 4 ID : 6306803512369

Q.1 Which of the following is NOT a factor crucial for quality education in an inclusive classroom environment?

- Ans**
- 1. Access to teaching learning materials
 - 2. Exclusivity of teaching methods for different learners
 - 3. Understanding of special needs of learners
 - 4. Availability of flexible educational content

Question ID : 630680896628
 Option 1 ID : 6306803512481
 Option 2 ID : 6306803512482
 Option 3 ID : 6306803512479
 Option 4 ID : 6306803512480

Q.2 How can teachers enhance learning opportunities for students with Cognitive Disabilities?

- Ans**
- 1. Focusing solely on individualized instruction without peer interaction
 - 2. Offering real-life experiences, peer assistance, and using technology as instructional tools
 - 3. By limiting hands-on learning opportunities
 - 4. Avoiding the use of technology and software for instruction

Question ID : 630680896633
 Option 1 ID : 6306803512501
 Option 2 ID : 6306803512502
 Option 3 ID : 6306803512499
 Option 4 ID : 6306803512500

Q.3 Which prenatal factor is known to increase the risk of learning disabilities in children?

- Ans**
- 1. Premature birth
 - 2. Postnatal trauma
 - 3. Adequate growth in the uterus
 - 4. Exposure to lead

Question ID : 630680896620
 Option 1 ID : 6306803512449
 Option 2 ID : 6306803512450
 Option 3 ID : 6306803512448
 Option 4 ID : 6306803512447

Q.4 How does hearing impairment impact the academic endeavors of children, particularly in language-based activities?

- Ans**
- 1. It enhances language acquisition skills
 - 2. It affects language comprehension and expression
 - 3. It has no effect on language and communication skills
 - 4. It improves reading and writing abilities

Question ID : 630680896631
 Option 1 ID : 6306803512491
 Option 2 ID : 6306803512494
 Option 3 ID : 6306803512493
 Option 4 ID : 6306803512492

Q.5 What are the four main skills affected by dyspraxia?

- Ans
- 1. Fine motor skills, gross motor skills, motor planning, and coordination
 - 2. Gross motor skills, visual acuity, motor planning, and coordination
 - 3. Speech difficulties, sensory sensitivities, visual acuity, and motor planning
 - 4. Fine motor skills, speech difficulties, sensory sensitivities, and coordination

Question ID : 630680896621
Option 1 ID : 6306803512453
Option 2 ID : 6306803512452
Option 3 ID : 6306803512454
Option 4 ID : 6306803512451

Q.6 Which of the following strategies is NOT recommended for teaching children with visual impairments at the primary stage?

- Ans
- 1. Focusing on visual stimulation for enhanced learning opportunities
 - 2. Providing detailed and descriptive instructions for listening
 - 3. Incorporating visual diagrams and charts for learning
 - 4. Utilizing touch involving real, concrete materials

Question ID : 630680896634
Option 1 ID : 6306803512506
Option 2 ID : 6306803512504
Option 3 ID : 6306803512505
Option 4 ID : 6306803512503

Q.7 What does AAC stand for in special education?

- Ans
- 1. Active and Adaptive Conversation
 - 2. Auditory and Audible Communication
 - 3. Articulate and Accurate Communication
 - 4. Augmentative and Alternative Communication

Question ID : 630680896617
Option 1 ID : 6306803512436
Option 2 ID : 6306803512437
Option 3 ID : 6306803512435
Option 4 ID : 6306803512438

Q.8 What does it mean to be a multimodal communicator?

- Ans
- 1. Having multiple ways to communicate messages
 - 2. Communicating solely through sign language
 - 3. Being unable to communicate effectively in single mode
 - 4. Using only one form of communication

Question ID : 630680896618
Option 1 ID : 6306803512440
Option 2 ID : 6306803512442
Option 3 ID : 6306803512441
Option 4 ID : 6306803512439

Q.9 What is the primary goal of vocational rehabilitation (VR) compared to medical treatment for a disease?

- Ans**
- 1. Providing specialized medical care
 - 2. Enhancing physical fitness and well-being
 - 3. Treating pathology and relieving symptoms
 - 4. Improving capability for work and achieving sustainable employment

Question ID : 630680896623
 Option 1 ID : 6306803512461
 Option 2 ID : 6306803512460
 Option 3 ID : 6306803512459
 Option 4 ID : 6306803512462

Q.10 Assertion: most cases of autism begin very early in the embryonic development of the child.

Reason: the children with autism are found to have specific genetic abnormalities.

- Ans**
- 1. Assertion is true, but Reason is false.
 - 2. Both Assertion and Reason are true, and Reason is the correct explanation of the Assertion.
 - 3. Assertion is false, but Reason is true.
 - 4. Both Assertion and Reason are true, but Reason is not the correct explanation of the Assertion

Question ID : 630680896627
 Option 1 ID : 6306803512477
 Option 2 ID : 6306803512475
 Option 3 ID : 6306803512478
 Option 4 ID : 6306803512476

Q.11 Which of the following is NOT a suggested strategy for managing behavior in students with Cognitive Disabilities?

- Ans**
- 1. Teaching self-advocacy skills such as asking for help and explaining needs
 - 2. Ignoring inappropriate behaviors to reinforce them
 - 3. Providing support programs like peer tutoring and buddy systems
 - 4. Establishing and maintaining consistent routines and classroom rules

Question ID : 630680896632
 Option 1 ID : 6306803512496
 Option 2 ID : 6306803512497
 Option 3 ID : 6306803512495
 Option 4 ID : 6306803512498

Q.12 What does message banking involve in AAC technology?

- Ans**
- 1. Recording and storing nonspeech sounds
 - 2. Digitally recording and storing messages with natural voice and intonation
 - 3. Electronically producing speech using phonemes and allophones
 - 4. Creating a synthetic voice resembling the individual's natural voice

Question ID : 630680896619
 Option 1 ID : 6306803512443
 Option 2 ID : 6306803512446
 Option 3 ID : 6306803512444
 Option 4 ID : 6306803512445

Q.13 Which of the following conditions is more commonly associated with Autism Spectrum Disorders ASD?

- Ans
- 1. Arthritis
 - 2. Hypertension
 - 3. Anxiety and depression
 - 4. Diabetes

Question ID : 630680896625
 Option 1 ID : 6306803512470
 Option 2 ID : 6306803512468
 Option 3 ID : 6306803512469
 Option 4 ID : 6306803512467

Q.14 At what age does autism spectrum disorders typically begin to manifest?

- Ans
- 1. Before the age of 3 years
 - 2. Only after 5 years
 - 3. After the age of 10 years
 - 4. During adolescence

Question ID : 630680896624
 Option 1 ID : 6306803512464
 Option 2 ID : 6306803512463
 Option 3 ID : 6306803512466
 Option 4 ID : 6306803512465

Q.15 What term is used to describe the high-tech devices that produce speech for individuals with limited or no means to communicate orally?

- Ans
- 1. Digital communication tools
 - 2. Voice Output Communication Aids
 - 3. Augmented speech devices
 - 4. Speech-enhancing gadgets

Question ID : 630680896635
 Option 1 ID : 6306803512509
 Option 2 ID : 6306803512508
 Option 3 ID : 6306803512510
 Option 4 ID : 6306803512507

Q.16 What is a key strategy for curricular adaptation in an inclusive classroom for Children With Special Needs (CWSN)?

- Ans
- 1. Utilizing standardized teaching methods for all students
 - 2. Providing continuous onsite support to teachers by specialists
 - 3. Segregation of CWSN from other students
 - 4. Exclusion of parents from the adaptation process

Question ID : 630680896629
 Option 1 ID : 6306803512484
 Option 2 ID : 6306803512485
 Option 3 ID : 6306803512483
 Option 4 ID : 6306803512486

Q.17 Which fingerspelling system predominates in Indian Sign Language throughout most of India?

- Ans
- 1. No handed system
 - 2. One-handed system
 - 3. No fingerspelling system
 - 4. Two-handed system

Question ID : 630680896616
Option 1 ID : 6306803512433
Option 2 ID : 6306803512432
Option 3 ID : 6306803512434
Option 4 ID : 6306803512431

Q.18 Which of the following statements best describes dyslexia?

- Ans
- 1. Dyslexia only impacts individuals with below-average intelligence.
 - 2. Dyslexia primarily affects motor skills and coordination.
 - 3. Dyslexia is a learning disorder that affects language comprehension and reading skills.
 - 4. Dyslexia is caused by exposure to environmental toxins during pregnancy.

Question ID : 630680896622
Option 1 ID : 6306803512457
Option 2 ID : 6306803512455
Option 3 ID : 6306803512456
Option 4 ID : 6306803512458

Q.19 Which of the following is an important component of communication behavior that is assessed in autistic children?

- Ans
- 1. Gross motor skills
 - 2. Verbal fluency
 - 3. Color recognition
 - 4. Visual acuity

Question ID : 630680896626
Option 1 ID : 6306803512471
Option 2 ID : 6306803512472
Option 3 ID : 6306803512474
Option 4 ID : 6306803512473

Q.20 What is a major challenge faced by mainstream school teachers in addressing the needs of children with disabilities, including those with hearing impairment?

- Ans
- 1. Insufficient teaching materials
 - 2. Excessive workload
 - 3. Limited professional training and experience
 - 4. Lack of appropriate classroom infrastructure

Question ID : 630680896630
Option 1 ID : 6306803512488
Option 2 ID : 6306803512490
Option 3 ID : 6306803512489
Option 4 ID : 6306803512487

Section : Discipline5

Q.1 Which statistical test is used to determine if there is a significant difference between the means of two independent groups?

- Ans
- 1. Regression analysis
 - 2. Chi-square test
 - 3. T-test
 - 4. ANOVA

Question ID : 630680896643
Option 1 ID : 6306803512542
Option 2 ID : 6306803512539
Option 3 ID : 6306803512540
Option 4 ID : 6306803512541

Q.2 Why is having a shared semantic base important for effective communication?

- Ans
- 1. It helps in understanding the syntactic structure of sentences.
 - 2. It facilitates social interactions and clear communication.
 - 3. It allows for the use of figurative language and rich description.
 - 4. It ensures grammatical accuracy in speech.

Question ID : 630680896637
Option 1 ID : 6306803512517
Option 2 ID : 6306803512518
Option 3 ID : 6306803512515
Option 4 ID : 6306803512516

Q.3 What skill is particularly difficult for individuals with autism, making it hard for them to live independently?

- Ans
- 1. Socializing
 - 2. Cooking
 - 3. Problem-solving and planning
 - 4. Driving

Question ID : 630680896640
Option 1 ID : 6306803512530
Option 2 ID : 6306803512527
Option 3 ID : 6306803512529
Option 4 ID : 6306803512528

Q.4 What type of assessment is used to evaluate a student's understanding during the learning process and provide feedback for improvement?

- Ans
- 1. Formative assessment
 - 2. Authentic assessment
 - 3. Diagnostic assessment
 - 4. Summative assessment

Question ID : 630680896645
Option 1 ID : 6306803512547
Option 2 ID : 6306803512550
Option 3 ID : 6306803512549
Option 4 ID : 6306803512548

Q.5 What's a big challenge for young adults with disabilities like Autistic Syndrome Disorders when it comes to becoming adults?

- Ans
- 1. Finding a job
 - 2. Learning new things
 - 3. Making friends
 - 4. Going out with family

Question ID : 630680896639
Option 1 ID : 6306803512523
Option 2 ID : 6306803512525
Option 3 ID : 6306803512526
Option 4 ID : 6306803512524

Q.6 What is the study of how individual words are combined to create sentences known as?

- Ans
- 1. Pragmatics
 - 2. Semantics
 - 3. Phonetics
 - 4. Syntax

Question ID : 630680896636
Option 1 ID : 6306803512512
Option 2 ID : 6306803512511
Option 3 ID : 6306803512514
Option 4 ID : 6306803512513

Q.7 What observable behaviors might indicate a student with low mental ability?

- Ans
- 1. Actively participating in classroom activities
 - 2. Excelling in academic achievements
 - 3. Frequently forgetting learned information
 - 4. Displaying strong self-confidence

Question ID : 630680896641
Option 1 ID : 6306803512534
Option 2 ID : 6306803512531
Option 3 ID : 6306803512532
Option 4 ID : 6306803512533

Q.8 What is the measure of central tendency that represents the most frequently occurring value in a dataset?

- Ans
- 1. Median
 - 2. Mode
 - 3. Mean
 - 4. Range

Question ID : 630680896642
Option 1 ID : 6306803512536
Option 2 ID : 6306803512537
Option 3 ID : 6306803512535
Option 4 ID : 6306803512538

Q.9 What is a key aspect of quality instructions in language classrooms?

- Ans
- 1. Avoiding scaffolded practice and task completion support
 - 2. Providing minimal explanations and limited modeling
 - 3. Teaching strategies for taking charge of tasks and situations
 - 4. Ignoring students' affect, motivation, and cognition

Question ID : 630680896638
Option 1 ID : 6306803512522
Option 2 ID : 6306803512519
Option 3 ID : 6306803512521
Option 4 ID : 6306803512520

Q.10 Which teaching method emphasizes student-centered learning, where the instructor acts as a facilitator rather than a lecturer?

- Ans
- 1. Traditional teaching
 - 2. Direct instruction
 - 3. Lecture-based instruction
 - 4. Inquiry-based learning

Question ID : 630680896644
Option 1 ID : 6306803512544
Option 2 ID : 6306803512543
Option 3 ID : 6306803512545
Option 4 ID : 6306803512546

Section : Teaching Methodology

Q.1 Which of the following is NOT the core of the discipline of education?

- Ans
- 1. Philosophy of education
 - 2. Psychology of education
 - 3. Technology of education
 - 4. History of education

Question ID : 630680896653
Option 1 ID : 6306803512579
Option 2 ID : 6306803512580
Option 3 ID : 6306803512581
Option 4 ID : 6306803512582

Q.2 Which of the following is an INCORRECT basic tenet of language across the curriculum?

- Ans
- 1. Language contributes to cognitive development.
 - 2. Language is prerequisite in cognitive development.
 - 3. Language is medium of improving learning.
 - 4. Language develops mainly through drills on vocabulary and grammar in the language classroom.

Question ID : 630680896652
Option 1 ID : 6306803512576
Option 2 ID : 6306803512575
Option 3 ID : 6306803512577
Option 4 ID : 6306803512578

Q.3 What can we call a test which provides the information that Ruth has done better than 60% of those who took that test?

- Ans
- 1. Diagnostic test
 - 2. Integrative test
 - 3. Criterion-referenced test
 - 4. Norm-referenced test

Question ID : 630680896657
Option 1 ID : 6306803512597
Option 2 ID : 6306803512595
Option 3 ID : 6306803512598
Option 4 ID : 6306803512596

Q.4 Which of the following is the correct fact about women's education?

- Ans
- 1. Globally more girls in rural area attend secondary schools than boys in rural area.
 - 2. Every additional year of primary school leaves girls more vulnerable to violence.
 - 3. Rural girls are twice as likely as urban girls to be out of school.
 - 4. Women make up the half of the world's illiterate population.

Question ID : 630680896654
Option 1 ID : 6306803512584
Option 2 ID : 6306803512585
Option 3 ID : 6306803512586
Option 4 ID : 6306803512583

Q.5 Which of the following is NOT the point of agreement between the behaviourist and social cognitive theories of learning?

- Ans
- 1. They agree that experience is an important cause of learning.
 - 2. They include the concept of reinforcement and punishment in their explanation of behaviour.
 - 3. They agree on the way environment and personal factors are described.
 - 4. They agree that feedback is important in promoting learning.

Question ID : 630680896651
Option 1 ID : 6306803512572
Option 2 ID : 6306803512574
Option 3 ID : 6306803512571
Option 4 ID : 6306803512573

Q.6 Which of the following facts is NOT true about dyslexia?

- Ans
- 1. Dyslexia affects individuals throughout their lives.
 - 2. Dyslexia is due to lack of intelligence.
 - 3. People with dyslexia have difficulties with specific language skills, particularly reading.
 - 4. Dyslexia is a language-based learning disability.

Question ID : 630680896658
Option 1 ID : 6306803512601
Option 2 ID : 6306803512602
Option 3 ID : 6306803512600
Option 4 ID : 6306803512599

Q.7 Which of the following steps in the Herbartian five-step system includes 'comparison with former ideas and consideration of their similarities and differences'?

- Ans
- 1. Presentation
 - 2. Application
 - 3. Association
 - 4. Generalisation

Question ID : 630680896655
Option 1 ID : 6306803512587
Option 2 ID : 6306803512590
Option 3 ID : 6306803512588
Option 4 ID : 6306803512589

Q.8 Which of the following is INCORRECT about simulation?

- Ans
- 1. It follows the principle of constructivist learning and teaching.
 - 2. Simulation has an element of competition, and the goal is to win.
 - 3. A simulation is a form of experiential learning.
 - 4. Simulations promote the use of critical and evaluative thinking.

Question ID : 630680896660
Option 1 ID : 6306803512608
Option 2 ID : 6306803512610
Option 3 ID : 6306803512607
Option 4 ID : 6306803512609

Q.9 Which of the following is NOT among Schwab's five commonplaces of curriculum?

- Ans
- 1. Government
 - 2. Curriculum making
 - 3. Student
 - 4. Teacher

Question ID : 630680896656
Option 1 ID : 6306803512593
Option 2 ID : 6306803512594
Option 3 ID : 6306803512592
Option 4 ID : 6306803512591

Test

Prime

By Adda247

Previous Year Papers PDF

PRACTICE MORE, SCORE HIGHER!



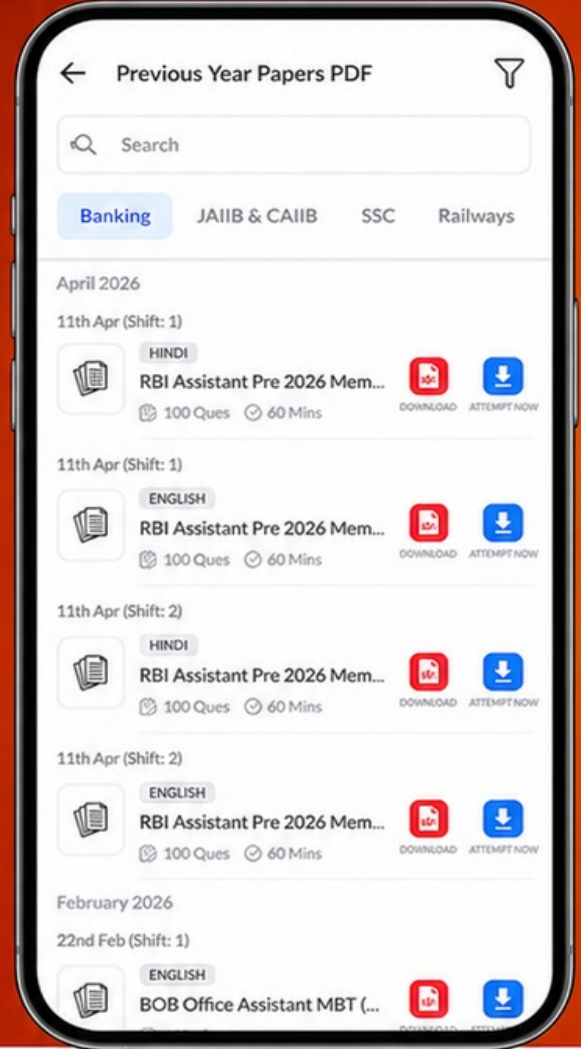
Free
25,000+
PDF's

High-Quality | Exam-Wise | Updated Regularly

ATTEMPT AS
MOCK



Turn PDFs into real exam experience.
Analyze. Improve. Succeed.



Topic-wise &
Exam-wise PDFs



Download &
Study Offline



Attempt as Mock
& Track Score



Smart Analysis
& Performance

AVAILABLE IN



Banking



SSC



Railway



Teaching



UGC



Agriculture



Nursing



Bihar



UP



Punjab



WB



Odisha



TN



AP & Telangana



Haryana



DOWNLOAD THE APP



Q.10 Which is the developmental task of adolescence period?

- Ans
- 1. Adjusting to aging parents
 - 2. Learning physical skills necessary for ordinary games
 - 3. Achieving masculine or feminine social role
 - 4. Learning sex difference and sexual modesty

Question ID : 630680896659

Option 1 ID : 6306803512606

Option 2 ID : 6306803512604

Option 3 ID : 6306803512603

Option 4 ID : 6306803512605

