



Odisha Sub-ordinate Staff Selection Commission
(OSSSC), Govt. of Odisha

Participants Id	
Participant Name	
Test Date	25/04/2026
Test Time	4:00 PM - 5:30 PM
Subject	Conduct of Written Test for the posts of Forester, Forest Guard and Excise Constable under CRE 2025 II
Candidate Application Photo	
Candidate Registration Photo	

* Note

Correct Answer will carry 1 mark per Question.
Incorrect Answer will carry 0.25 Negative mark per Question.

- Options shown in green color with a tick icon are correct.
- Chosen option on the right of the question indicates the option selected by the candidate.

Section : **Mathematics**

**Test
Prime**

By Adda247

ALL EXAMS, ONE SUBSCRIPTION



Test. Analyze. Improve. Repeat.



Don't just prepare. Perform.

Test Prime — built only for mock tests.



1,50,000+
Mock Tests



25,000+
Previous Year Papers



800+
Exam Covered



500% Refund
on Selection



5 lakh+
Free Quizzes



Daily
Free PDFs



Job Alerts
Stay Updated

- Multilingual
- Detailed Solution
- Strong and Weak Areas



**All India
Rankings**

Compete with lakhs.
Rank. Improve. Repeat.



← Adda247 test prime

Rating ▾

Editors' choice

New



Adda247 Test Prime
Adda Education • Education
Installed



DOWNLOAD THE APP



Q.1	A car travels at a speed of 78 km/hr. How far will it travel in 2.5 hours?
Ans	<input type="checkbox"/> A. 205 km
	<input type="checkbox"/> B. 175 km
	<input type="checkbox"/> C. 185 km
	<input checked="" type="checkbox"/> D. 195 km

Question Type :	MCQ
Question ID :	441009225110
Option 1 ID :	441009881556
Option 2 ID :	441009881553
Option 3 ID :	441009881554
Option 4 ID :	441009881555
Status :	Answered
Chosen Option :	D

Q.2	A rectangular field has a perimeter of 340 metres. If the length is 20 metres more than the width, find the area of the field.
Ans	<input checked="" type="checkbox"/> A. 7,125 m ²
	<input type="checkbox"/> B. 8,000 m ²
	<input type="checkbox"/> C. 7,250 m ²
	<input type="checkbox"/> D. 6,800 m ²

Question Type :	MCQ
Question ID :	441009294328
Option 1 ID :	4410091144341
Option 2 ID :	4410091144343
Option 3 ID :	4410091144342
Option 4 ID :	4410091144340
Status :	Answered
Chosen Option :	A

Q.3	The marks of 5 students are 10, 20, 20, 30, 40. Find the mode.
Ans	<input type="checkbox"/> A. 40
	<input checked="" type="checkbox"/> B. 20
	<input type="checkbox"/> C. 30
	<input type="checkbox"/> D. 10

Question Type :	MCQ
Question ID :	4410091822789
Option 1 ID :	4410097185979
Option 2 ID :	4410097185977
Option 3 ID :	4410097185978
Option 4 ID :	4410097185976
Status :	Answered
Chosen Option :	B

Q.4 A container contains 120 liters of juice. 18 liters of juice is replaced with water. Later, 18 liters of the mixture of juice and water is replaced with water. What is the amount of juice (in liters) left in the container?

- Ans**
- A. 86.8
 - B. 86.7
 - C. 86.5
 - D. 86.4

Question Type :	MCQ
Question ID :	4410091583824
Option 1 ID :	4410096256623
Option 2 ID :	4410096256621
Option 3 ID :	4410096256620
Option 4 ID :	4410096256622
Status :	Not Attempted and Marked For Review
Chosen Option :	--

Q.5 The population of a town in 1980 was 3,70,000. If its population increased in two successive decades by 28% in each decade, the population of the town in 2000 was:

- Ans**
- A. 6,06,208
 - B. 6,06,204
 - C. 6,06,213
 - D. 6,06,207

Question Type :	MCQ
Question ID :	441009919714
Option 1 ID :	4410093632827
Option 2 ID :	4410093632830
Option 3 ID :	4410093632828
Option 4 ID :	4410093632829
Status :	Answered
Chosen Option :	A

Q.6 A started a business by investing ₹1,50,000. After 7 months, B joined him with some investment. At the end of the year, the total profit was divided between A and B in the ratio of 12:7. Find the difference between the initial investments made by A and B.4314

- Ans**
- A. ₹55,000
 - B. ₹60,000
 - C. ₹70,000
 - D. ₹65,000

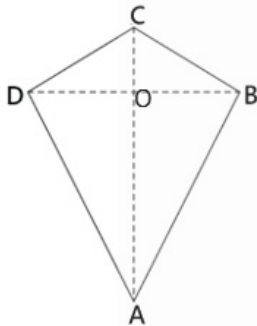
Question Type :	MCQ
Question ID :	441009897627
Option 1 ID :	4410093544578
Option 2 ID :	4410093544579
Option 3 ID :	4410093544581
Option 4 ID :	4410093544580
Status :	Answered
Chosen Option :	B

Q.7 A shopkeeper fixes the marked price of an item at 60% above its cost price. What percentage of discount on the marked price should be allowed to gain 28%?

- Ans**
- A. 22%
 - B. 18%
 - C. 20%
 - D. 19%

Question Type :	MCQ
Question ID :	441009566591
Option 1 ID :	4410092221485
Option 2 ID :	4410092221487
Option 3 ID :	4410092221484
Option 4 ID :	4410092221486
Status :	Answered
Chosen Option :	C

Q.8 The diagonals of the kite ABCD shown in the figure intersect at O. if $\angle DAB = 56^\circ$, $\angle BCD = 74^\circ$, then the value of $3\angle ODA + 2\angle OBC$ is:



- Ans**
- A. 264°
 - B. 312°
 - C. 346°
 - D. 292°

Question Type :	MCQ
Question ID :	441009621104
Option 1 ID :	4410092438550
Option 2 ID :	4410092438549
Option 3 ID :	4410092438551
Option 4 ID :	4410092438548
Status :	Answered
Chosen Option :	D

Q.9 Pipe X can fill a tank in 5 hours while Pipe X, along with Pipe Y (which can empty the tank in $6\frac{2}{3}$ hours). How long pipe Y alone will take to empty $\frac{3}{4}$ of the tank?

- Ans
- A. 18 hours
 - B. 12 hours
 - C. 15 hours
 - D. 20 hours

Question Type :	MCQ
Question ID :	441009170368
Option 1 ID :	441009674386
Option 2 ID :	441009674388
Option 3 ID :	441009674387
Option 4 ID :	441009674385
Status :	Answered
Chosen Option :	A

Q.10 Three numbers are in the ratio 7 : 9 : 4, and their LCM is 6048. What is their HCF?

- Ans
- A. 21
 - B. 51
 - C. 41
 - D. 24

Question Type :	MCQ
Question ID :	441009525330
Option 1 ID :	4410092056740
Option 2 ID :	4410092056741
Option 3 ID :	4410092056742
Option 4 ID :	4410092056739
Status :	Answered
Chosen Option :	D

Q.11 Pipes P and Q can fill a tank in 3 and 5 hours, respectively. Pipe R can empty it in 10 hours. If all the three pipes are opened together, then find the time taken to fill the tank.6650

- Ans
- A. 3 hours
 - B. 9 hours
 - C. $2\frac{4}{13}$ hours
 - D. $6\frac{1}{2}$ hours

Question Type :	MCQ
Question ID :	441009899963
Option 1 ID :	4410093553922
Option 2 ID :	4410093553924
Option 3 ID :	4410093553925
Option 4 ID :	4410093553923
Status :	Answered
Chosen Option :	C

Q.1 The ratio of two numbers is 6:7. If 6 is subtracted from each number, the new ratio becomes 5:6. Find the original smaller number.

- Ans**
- A. 48
 - B. 30
 - C. 24
 - D. 36

Question Type :	MCQ
Question ID :	4410091836759
Option 1 ID :	4410097240677
Option 2 ID :	4410097240675
Option 3 ID :	4410097240674
Option 4 ID :	4410097240676
Status :	Answered
Chosen Option :	D

Q.1 Amit invested equal sums at simple interest and compound interest (compounded annually) for a period of 2 years at the same rate of 4% per annum. At the end of the period, the difference between the two interests earned was ₹41. What was the amount (in ₹) invested in each case?

- Ans**
- A. 25,625
 - B. 24,875
 - C. 25,975
 - D. 24,725

Question Type :	MCQ
Question ID :	441009897830
Option 1 ID :	4410093545390
Option 2 ID :	4410093545391
Option 3 ID :	4410093545393
Option 4 ID :	4410093545392
Status :	Not Attempted and Marked For Review
Chosen Option :	--

Q.1 A man walks 12 km in 2 hours and another 18 km in 3 hours. What is his average speed?

- Ans**
- A. 6 km/hr
 - B. 6.5 km/hr
 - C. 7 km/hr
 - D. 5.5 km/hr

Question Type :	MCQ
Question ID :	4410091214174
Option 1 ID :	4410094790082
Option 2 ID :	4410094790083
Option 3 ID :	4410094790084
Option 4 ID :	4410094790081
Status :	Answered
Chosen Option :	A

Q.1	Subtracting 8% of X from X is the same as multiplying X by:
5	
Ans	<input checked="" type="checkbox"/> A. 0.08
	<input checked="" type="checkbox"/> B. 0.92
	<input checked="" type="checkbox"/> C. 0.008
	<input checked="" type="checkbox"/> D. 0.5

Question Type :	MCQ
Question ID :	441009857526
Option 1 ID :	4410093383077
Option 2 ID :	4410093383076
Option 3 ID :	4410093383079
Option 4 ID :	4410093383078
Status :	Answered
Chosen Option :	B

Q.1	What sum (in ₹) will earn an interest of ₹500 in 4 years at 5% simple interest per year?
6	
Ans	<input checked="" type="checkbox"/> A. 2500
	<input checked="" type="checkbox"/> B. 2650
	<input checked="" type="checkbox"/> C. 2300
	<input checked="" type="checkbox"/> D. 2700

Question Type :	MCQ
Question ID :	441009853099
Option 1 ID :	4410093365368
Option 2 ID :	4410093365371
Option 3 ID :	4410093365369
Option 4 ID :	4410093365370
Status :	Answered
Chosen Option :	A

Q.1	The ratio of male and female workers in a factory is 13:10. If there are 234 male workers, find the difference between male and female workers.
7	
Ans	<input checked="" type="checkbox"/> A. 42
	<input checked="" type="checkbox"/> B. 38
	<input checked="" type="checkbox"/> C. 54
	<input checked="" type="checkbox"/> D. 50

Question Type :	MCQ
Question ID :	4410091434349
Option 1 ID :	4410095665952
Option 2 ID :	4410095665951
Option 3 ID :	4410095665954
Option 4 ID :	4410095665953
Status :	Answered
Chosen Option :	C

Q.1 8	If a microwave oven is listed at ₹12,000 and sold at ₹10,800, then what is the percentage of discount given?
Ans	<input checked="" type="checkbox"/> A. 15%
	<input checked="" type="checkbox"/> B. 8%
	<input checked="" type="checkbox"/> C. 12%
	<input checked="" type="checkbox"/> D. 10%

Question Type :	MCQ
Question ID :	4410091589693
Option 1 ID :	4410096279319
Option 2 ID :	4410096279316
Option 3 ID :	4410096279318
Option 4 ID :	4410096279317
Status :	Answered
Chosen Option :	D

Q.1 9	The quadratic equation whose roots are $2 - \sqrt{3}$ and $2 + \sqrt{3}$ is _____.
Ans	<input checked="" type="checkbox"/> A. $x^2 - 4x + 1 = 0$
	<input checked="" type="checkbox"/> B. $x^2 + 4x + 1 = 0$
	<input checked="" type="checkbox"/> C. $x^2 + 2x + 1 = 0$
	<input checked="" type="checkbox"/> D. $x^2 - 2x - 1 = 0$

Question Type :	MCQ
Question ID :	4410091226460
Option 1 ID :	4410094839323
Option 2 ID :	4410094839324
Option 3 ID :	4410094839326
Option 4 ID :	4410094839325
Status :	Not Attempted and Marked For Review
Chosen Option :	--

Q.2 0	Three numbers are in the ratio of 3 : 5 : 7 and their LCM is 2625. If m be the HCF, then find the value of $5m + 11$.
Ans	<input checked="" type="checkbox"/> A. 133
	<input checked="" type="checkbox"/> B. 163
	<input checked="" type="checkbox"/> C. 136
	<input checked="" type="checkbox"/> D. 166

Question Type :	MCQ
Question ID :	441009201542
Option 1 ID :	441009793366
Option 2 ID :	441009793364
Option 3 ID :	441009793365
Option 4 ID :	441009793367
Status :	Answered
Chosen Option :	C

Q.2 Who among the following accompanied Sardar Patel during his Odisha visit for integration talks in December 1947?

- Ans** A. V.P. Menon
 B. J.B. Kripalani
 C. Jawaharlal Nehru
 D. Rajendra Prasad

Question Type :	MCQ
Question ID :	441009641243
Option 1 ID :	4410092519109
Option 2 ID :	4410092519107
Option 3 ID :	4410092519110
Option 4 ID :	4410092519108
Status :	Not Answered
Chosen Option :	--

Q.2 The normal blood pressure of a healthy adult is approximately:

- Ans** A. 100/60 mm Hg
 B. 90/60 mm Hg
 C. 140/90 mm Hg
 D. 120/80 mm Hg

Question Type :	MCQ
Question ID :	4410091454390
Option 1 ID :	4410095745870
Option 2 ID :	4410095745872
Option 3 ID :	4410095745871
Option 4 ID :	4410095745869
Status :	Answered
Chosen Option :	D

Q.2 Who was the president of the Swaraj party formed in the year 1923?

- Ans** A. Motilal Nehru
 B. Jawaharlal Nehru
 C. Lala Lajpat Rai
 D. C. R. Das

Question Type :	MCQ
Question ID :	4410091068815
Option 1 ID :	4410094220755
Option 2 ID :	4410094220758
Option 3 ID :	4410094220756
Option 4 ID :	4410094220757
Status :	Answered
Chosen Option :	A

Q.2 Which of the following schemes, launched in February 2024, aims to provide free electricity to households through rooftop solar installations?

Ans A. PM Surya Ghar: Muft Bijli Yojana

B. PM Solar Rooftop Free Yojana

C. PM Solar Power Mission

D. PM Green Energy Initiative

Question Type : MCQ

Question ID : 441009869087

Option 1 ID : 4410093429380

Option 2 ID : 4410093429379

Option 3 ID : 4410093429381

Option 4 ID : 4410093429382

Status : Answered

Chosen Option : A

Q.2 'Swami and Friends' is a famous novel written by _____.

Ans A. RK Narayan

B. Vikram Seth

C. Salman Rushdie

D. Rabindranath Tagore

Question Type : MCQ

Question ID : 4410091119725

Option 1 ID : 4410094414788

Option 2 ID : 4410094414789

Option 3 ID : 4410094414787

Option 4 ID : 4410094414786

Status : Not Answered

Chosen Option : --

Q.2 Which of the following Indian states is home to the freshwater lake named Sara?

Ans A. West Bengal

B. Uttarakhand

C. Rajasthan

D. Odisha

Question Type : MCQ

Question ID : 441009642525

Option 1 ID : 4410092524244

Option 2 ID : 4410092524245

Option 3 ID : 4410092524246

Option 4 ID : 4410092524243

Status : Not Answered

Chosen Option : --

Q.2 On 28 August 2025, who inaugurated the 'Matsya Shakti' project, jointly implemented by the Ministry of Minority Affairs and the ICAR–Central Marine Fisheries Research Institute (CMFRI)?

- Ans**
- A. George Kurian
 - B. Nirjala Sitharaman
 - C. Piyush Goyal
 - D. Shivraj Singh Chouhan

Question Type :	MCQ
Question ID :	4410091261202
Option 1 ID :	4410094977705
Option 2 ID :	4410094977707
Option 3 ID :	4410094977708
Option 4 ID :	4410094977706
Status :	Answered
Chosen Option :	D

Q.2 The concepts of dharma, karma and moksa together explain the Hindu view of life.
8 What is the relationship between these three concepts?

- Ans**
- A. Dharma and moksa are not related to karma
 - B. Karma determines dharma and dharma determines moksa
 - C. Moksa determines karma and karma determines dharma
 - D. Dharma determines karma and karma leads to moksa

Question Type :	MCQ
Question ID :	441009866478
Option 1 ID :	4410093418947
Option 2 ID :	4410093418946
Option 3 ID :	4410093418945
Option 4 ID :	4410093418944
Status :	Answered
Chosen Option :	B

Q.2 Metals generally have resistivity in which of the following ranges?
9

- Ans**
- A. 10-2 to 100 $\Omega \cdot m$
 - B. 10⁻⁸ to 10⁻⁶ $\Omega \cdot m$
 - C. 10² to 10⁵ $\Omega \cdot m$
 - D. 1 to 10 $\Omega \cdot m$

Question Type :	MCQ
Question ID :	4410091433528
Option 1 ID :	4410095662654
Option 2 ID :	4410095662653
Option 3 ID :	4410095662655
Option 4 ID :	4410095662656
Status :	Not Answered
Chosen Option :	--

Q.3 Which of the following monuments is/are built by Emperor Shah Jahan?
0

- I. Moti Masjid
- II. Taj Mahal
- III. Jodhabai Mahal
- IV. Buland Darwaza

Ans A. I and II only

B. I, II and IV only

C. I, II and III only

D. III and IV only

Question Type : **MCQ**

Question ID : **441009892800**

Option 1 ID : **4410093525270**

Option 2 ID : **4410093525271**

Option 3 ID : **4410093525273**

Option 4 ID : **4410093525272**

Status : **Not Answered**

Chosen Option : **--**

Q.3 Where was the Matsya-Pranee Samavesh Odisha 2026 organized to exhibit modern farming methods?
1

Ans A. Sambalpur

B. Puri

C. Rourkela

D. Bhubaneswar

Question Type : **MCQ**

Question ID : **4410091863092**

Option 1 ID : **4410097342566**

Option 2 ID : **4410097342567**

Option 3 ID : **4410097342569**

Option 4 ID : **4410097342568**

Status : **Answered**

Chosen Option : **D**

Q.3 Which annual maritime-heritage observance in Odisha symbolically commemorates the ancient sea-voyages of Kalinga traders to Southeast Asian regions including present-day Indonesia?
2

Ans A. Dhanu Jatra

B. Boita Bandana (Bali Jatra)

C. Nabakalebara

D. Konark Dance Festival

Question Type : **MCQ**

Question ID : **4410091334362**

Option 1 ID : **4410095269119**

Option 2 ID : **4410095269121**

Option 3 ID : **4410095269122**

Option 4 ID : **4410095269120**

Status : **Answered**

Chosen Option : **B**

Q.3	Which pollutant is mainly responsible for acid rain?
3	
Ans	<input checked="" type="checkbox"/> A. Sulfur dioxide and nitrogen oxides
	<input type="checkbox"/> B. Methane from agriculture
	<input type="checkbox"/> C. Ozone depletion
	<input type="checkbox"/> D. Carbon dioxide emissions

Question Type :	MCQ
Question ID :	4410091331133
Option 1 ID :	4410095256130
Option 2 ID :	4410095256131
Option 3 ID :	4410095256132
Option 4 ID :	4410095256129
Status :	Answered
Chosen Option :	A

Q.3	In which direction do the summer monsoon winds blow over the Indian subcontinent?
4	
Ans	<input type="checkbox"/> A. East to West
	<input type="checkbox"/> B. North to South
	<input checked="" type="checkbox"/> C. Southwest to Northeast
	<input type="checkbox"/> D. Northeast to Southwest

Question Type :	MCQ
Question ID :	441009249619
Option 1 ID :	441009972462
Option 2 ID :	441009972463
Option 3 ID :	441009972460
Option 4 ID :	441009972461
Status :	Not Answered
Chosen Option :	--

Q.3	What are large balls of gas in the universe - mainly hydrogen and helium - that are releasing lots of heat and light energy due to chemical processes?
5	
Ans	<input type="checkbox"/> A. Galaxy
	<input type="checkbox"/> B. Nebulae
	<input checked="" type="checkbox"/> C. Stars
	<input type="checkbox"/> D. Milky way

Question Type :	MCQ
Question ID :	44100962955
Option 1 ID :	441009250852
Option 2 ID :	441009250853
Option 3 ID :	441009250851
Option 4 ID :	441009250854
Status :	Answered
Chosen Option :	B

Q.3 In which of the following years was the Civil Disobedience Movement launched?
6

- Ans** A. 1930
 B. 1935
 C. 1923
 D. 1927

Question Type :	MCQ
Question ID :	441009963049
Option 1 ID :	4410093805564
Option 2 ID :	4410093805565
Option 3 ID :	4410093805563
Option 4 ID :	4410093805562
Status :	Answered
Chosen Option :	D

Q.3 Which Article of the Indian Constitution provides the directive to the state to foster respect for international law and treaty obligations?
7

- Ans** A. Article 50
 B. Article 49
 C. Article 48
 D. Article 51

Question Type :	MCQ
Question ID :	441009325223
Option 1 ID :	4410091267208
Option 2 ID :	4410091267210
Option 3 ID :	4410091267211
Option 4 ID :	4410091267209
Status :	Not Answered
Chosen Option :	--

Q.3 The Southwest monsoon season in Odisha typically occurs during which period?
8

- Ans** A. March to May
 B. December to February
 C. October and November
 D. June to September

Question Type :	MCQ
Question ID :	4410091424491
Option 1 ID :	4410095626817
Option 2 ID :	4410095626815
Option 3 ID :	4410095626818
Option 4 ID :	4410095626816
Status :	Not Answered
Chosen Option :	--

Q.3 Which initiative announced by the Finance Minister in the Union Budget 2026-2027 focuses on providing customized, industry-relevant training to Divyangjans in sectors like IT, AVGC, Hospitality, and Food & Beverages?

- Ans**
- A. Divyangjan Sashaktikaran Yojana
 - B. Divyangjan Vikas Yojana
 - C. Divyangjan Kaushal Yojana
 - D. Divyangjan Rozgar Yojana

Question Type :	MCQ
Question ID :	4410091835233
Option 1 ID :	4410097234735
Option 2 ID :	4410097234734
Option 3 ID :	4410097234732
Option 4 ID :	4410097234733
Status :	Answered
Chosen Option :	A

Q.4 Which city hosted the Kalinga Literary Festival 2026?

- Ans**
- A. Bhubaneswar
 - B. Puri
 - C. Berhampur
 - D. Sambalpur

Question Type :	MCQ
Question ID :	4410091863087
Option 1 ID :	4410097342547
Option 2 ID :	4410097342546
Option 3 ID :	4410097342548
Option 4 ID :	4410097342549
Status :	Answered
Chosen Option :	B

Q.4 India announced the opening and operationalization of two new Consulates General in which Russian cities to strengthen regional cooperation in November 2025?

- Ans**
- A. Moscow and St. Petersburg
 - B. Novosibirsk and Vladivostok
 - C. Yekaterinburg and Kazan
 - D. Sochi and Nizhny Novgorod

Question Type :	MCQ
Question ID :	4410091837929
Option 1 ID :	4410097245306
Option 2 ID :	4410097245308
Option 3 ID :	4410097245307
Option 4 ID :	4410097245309
Status :	Not Answered
Chosen Option :	--

Q.4 Which of the following articles deals with the Right to Freedom of Speech and Expression?
2

- Ans**
- A. Article 21
 - B. Article 25
 - C. Article 19
 - D. Article 14

Question Type :	MCQ
Question ID :	44100971160
Option 1 ID :	441009283025
Option 2 ID :	441009283026
Option 3 ID :	441009283024
Option 4 ID :	441009283023
Status :	Answered
Chosen Option :	C

Q.4 The Joint Parliamentary Committee, whose tenure was extended by the Lok Sabha in March 2026, is examining legislation related to which of the following?
3

- Ans**
- A. Digital Personal Data Protection
 - B. National Education Policy
 - C. One Nation, One Election
 - D. Uniform Civil Code

Question Type :	MCQ
Question ID :	4410091836303
Option 1 ID :	4410097238895
Option 2 ID :	4410097238896
Option 3 ID :	4410097238897
Option 4 ID :	4410097238894
Status :	Not Answered
Chosen Option :	--

Q.4 Article 51A of the Constitution of India is related to:
4

- Ans**
- A. Fundamental duties
 - B. Equal justice and free legal aid
 - C. Attorney-General for India
 - D. Constitution of Parliament

Question Type :	MCQ
Question ID :	441009870451
Option 1 ID :	4410093434756
Option 2 ID :	4410093434757
Option 3 ID :	4410093434758
Option 4 ID :	4410093434759
Status :	Answered
Chosen Option :	B

Q.4	An atom has 8 protons and 8 neutrons. What is its mass number?
5	
Ans	<input checked="" type="checkbox"/> A. 24
	<input checked="" type="checkbox"/> B. 32
	<input checked="" type="checkbox"/> C. 16
	<input checked="" type="checkbox"/> D. 8

Question Type :	MCQ
Question ID :	4410091432135
Option 1 ID :	4410095656872
Option 2 ID :	4410095656873
Option 3 ID :	4410095656870
Option 4 ID :	4410095656871
Status :	Not Answered
Chosen Option :	--

Section : English

Q.4	Select the most appropriate option that can substitute the underlined segment in the given sentence. The soldier showed <u>great courage</u> in the face of danger.
6	
Ans	<input checked="" type="checkbox"/> A. valor
	<input checked="" type="checkbox"/> B. vanity
	<input checked="" type="checkbox"/> C. resilience
	<input checked="" type="checkbox"/> D. prudence

Question Type :	MCQ
Question ID :	4410091829419
Option 1 ID :	4410097211775
Option 2 ID :	4410097211776
Option 3 ID :	4410097211778
Option 4 ID :	4410097211777
Status :	Not Answered
Chosen Option :	--

Q.4	Parts of a sentence are given below. While the first and the last part (S1) and (S6) are in correct order, the parts in between are jumbled up. Arrange the parts in the correct order to form a meaningful sentence. S1. Because the rain was P. the players waited in Q. was postponed, and R. heavy, the football match S. the locker room S6. until the storm passed.
7	
Ans	<input checked="" type="checkbox"/> A. SRPQ
	<input checked="" type="checkbox"/> B. PSQR
	<input checked="" type="checkbox"/> C. QPRS
	<input checked="" type="checkbox"/> D. RQPS

Question Type :	MCQ
Question ID :	4410091818848
Option 1 ID :	4410097170703
Option 2 ID :	4410097170704
Option 3 ID :	4410097170705
Option 4 ID :	4410097170702
Status :	Answered
Chosen Option :	D

Q.4 8	Select the correct passive voice of the given sentence. The child opened the gift excitedly.
Ans	<input checked="" type="checkbox"/> A. The gift is opened by the child excitedly.
	<input checked="" type="checkbox"/> B. The gift opened the child excitedly.
	<input checked="" type="checkbox"/> C. The gift had been opened by the child excitedly.
	<input checked="" type="checkbox"/> D. The gift was opened by the child excitedly.

Question Type :	MCQ
Question ID :	4410091394407
Option 1 ID :	4410095507239
Option 2 ID :	4410095507236
Option 3 ID :	4410095507237
Option 4 ID :	4410095507238
Status :	Answered
Chosen Option :	D

Q.4 9	Choose the correct one-word substitute for the highlighted segment. He is known as a/an one who deliberately sets fire to buildings.
Ans	<input checked="" type="checkbox"/> A. saboteur
	<input checked="" type="checkbox"/> B. offender
	<input checked="" type="checkbox"/> C. arsonist
	<input checked="" type="checkbox"/> D. desperado

Question Type :	MCQ
Question ID :	4410091825738
Option 1 ID :	4410097197238
Option 2 ID :	4410097197241
Option 3 ID :	4410097197239
Option 4 ID :	4410097197240
Status :	Not Answered
Chosen Option :	--

Q.5 0	Which of the following best explains the meaning of the proverb 'An Englishman's home is his castle'?
Ans	<input checked="" type="checkbox"/> A. The home is less important than public spaces in providing shelter.
	<input checked="" type="checkbox"/> B. People should keep their homes open to friends and strangers alike.
	<input checked="" type="checkbox"/> C. An individual's home is a place of relaxation and social gathering.
	<input checked="" type="checkbox"/> D. A person's home is their private domain where they should feel secure and in control.

Question Type :	MCQ
Question ID :	441009411711
Option 1 ID :	4410091612237
Option 2 ID :	4410091612235
Option 3 ID :	4410091612234
Option 4 ID :	4410091612236
Status :	Answered
Chosen Option :	D

Q.5 Choose the correct antonym for the underlined word in the given sentence.
1
She used her experience to leverage new opportunities and advance her career successfully.

Ans A. Manage
 B. Dominate
 C. Motivate
 D. Weaken

Question Type :	MCQ
Question ID :	4410091493169
Option 1 ID :	4410095898350
Option 2 ID :	4410095898348
Option 3 ID :	4410095898351
Option 4 ID :	4410095898349
Status :	Answered
Chosen Option :	A

Q.5 Choose the sentence which is correctly written in Future Tense.
2

Ans A. He works on the project every day.
 B. He will be working on the project tomorrow night.
 C. He was working on the project last night.
 D. He has been working on the project since Monday.

Question Type :	MCQ
Question ID :	4410091455733
Option 1 ID :	4410095751260
Option 2 ID :	4410095751262
Option 3 ID :	4410095751259
Option 4 ID :	4410095751261
Status :	Answered
Chosen Option :	B

Q.5 Select the correct idiom to replace the underlined segment in the given sentence.
3
Despite his injury, the player decided to continue playing bravely.

Ans A. bite the bullet
 B. hit the head
 C. hit the sack
 D. break the ice

Question Type :	MCQ
Question ID :	4410091459733
Option 1 ID :	4410095767099
Option 2 ID :	4410095767102
Option 3 ID :	4410095767101
Option 4 ID :	4410095767100
Status :	Answered
Chosen Option :	D

Q.5 Identify the part of the sentence that contains the error.
4 The manager demanded that each employee submits their monthly report by the end of the week without delay.

- Ans**
- A. The manager demanded
 - B. submits their monthly report
 - C. that each employee
 - D. by the end of the week

Question Type :	MCQ
Question ID :	4410091825444
Option 1 ID :	4410097196083
Option 2 ID :	4410097196085
Option 3 ID :	4410097196084
Option 4 ID :	4410097196086
Status :	Answered
Chosen Option :	B

Q.5 Which of the following sentences uses the past tense form of the verb correctly?
5

- Ans**
- A. He had ran five miles before he realized he was heading the wrong way.
 - B. After the marathon, she drunk nearly a gallon of water to rehydrate.
 - C. The sun rose at 6:00 AM, casting a golden hue over the sleeping valley.
 - D. The choir sung the national anthem with incredible precision last night.

Question Type :	MCQ
Question ID :	4410091832595
Option 1 ID :	4410097224396
Option 2 ID :	4410097224393
Option 3 ID :	4410097224395
Option 4 ID :	4410097224394
Status :	Answered
Chosen Option :	A

Q.5 Which part of the given sentence has an error? If there's no error, select 'No error'.
6

1. The old man/ 2. along with his two sons/ 3. were running the business successfully.

- Ans**
- A. 4. No error
 - B. 2. along with his two sons
 - C. 3. were running the business successfully.
 - D. 1. The old man

Question Type :	MCQ
Question ID :	4410091819281
Option 1 ID :	4410097172401
Option 2 ID :	4410097172399
Option 3 ID :	4410097172400
Option 4 ID :	4410097172398
Status :	Answered
Chosen Option :	B

Q.5 Select the option which can be used as a one-word substitute for the group of highlighted words.
7
The driver was arrested because he acted as a/an **person who helped another person in crime** during the robbery.

- Ans**
- A. informer
 - B. accomplice
 - C. culprit
 - D. witness

Question Type :	MCQ
Question ID :	4410091825201
Option 1 ID :	4410097195118
Option 2 ID :	4410097195115
Option 3 ID :	4410097195116
Option 4 ID :	4410097195117
Status :	Answered
Chosen Option :	C

Q.5 The given sentence is divided into segments. Select the option that has the segment with the grammatical error.
8
A. She spoke very soft B. during the entire meeting C. to avoid attracting attention D. from others.

- Ans**
- A. C. to avoid attracting attention
 - B. D. from others.
 - C. B. during the entire meeting
 - D. A. She spoke very soft

Question Type :	MCQ
Question ID :	4410091826778
Option 1 ID :	4410097201218
Option 2 ID :	4410097201219
Option 3 ID :	4410097201217
Option 4 ID :	4410097201216
Status :	Answered
Chosen Option :	A

Q.5 Fill in the blank with the correct Direct speech of the given sentence.
9
The committee informed the members that there would be no meeting that day. The committee said to the members, "There _____."

- Ans**
- A. is no meeting today
 - B. could be no meeting that day
 - C. was no meeting that day
 - D. will be no meeting today

Question Type :	MCQ
Question ID :	4410091835511
Option 1 ID :	4410097235791
Option 2 ID :	4410097235790
Option 3 ID :	4410097235793
Option 4 ID :	4410097235792
Status :	Answered
Chosen Option :	C

Q.6 In the sentence, 'Her actions were completely transparent,' what is the correct antonym for 'transparent'?

- Ans**
- A. Lucid
 - B. Clear
 - C. Opaque
 - D. Crystal

Question Type :	MCQ
Question ID :	4410091818608
Option 1 ID :	4410097169758
Option 2 ID :	4410097169761
Option 3 ID :	4410097169760
Option 4 ID :	4410097169759
Status :	Answered
Chosen Option :	B

Comprehension:

Read the given passage carefully and answer the questions that follow.

Habits are actions that people perform regularly, often without thinking about them. Scientists explain that habits are formed through repetition. When a person repeats the same behaviour many times, the brain begins to perform that action automatically. This process helps people save mental energy because they do not need to make a decision every time they act.

Researchers often describe habit formation as a cycle that includes a cue, a routine, and a reward. A cue is a signal that triggers a behaviour. The routine is the action itself, and the reward is the benefit that follows the action. Over time, the brain begins to expect the reward and repeats the routine whenever the cue appears.

Habits can be both helpful and harmful. Positive habits such as regular exercise or daily reading can improve health and knowledge. However, negative habits may develop if people repeat unhealthy behaviours.

SubQuestion No : 61

Q.6 Which of the following would be the most suitable title for the passage?

1

- Ans**
- A. The Science of Habit Formation
 - B. The Psychology of Daily Emotions
 - C. The Development of Human Intelligence
 - D. The Importance of Physical Exercise

Question Type :	MCQ
Question ID :	4410091821912
Option 1 ID :	4410097182758
Option 2 ID :	4410097182759
Option 3 ID :	4410097182757
Option 4 ID :	4410097182756
Status :	Answered
Chosen Option :	A

Comprehension:

Read the given passage carefully and answer the questions that follow.

Habits are actions that people perform regularly, often without thinking about them. Scientists explain that habits are formed through repetition. When a person repeats the same behaviour many times, the brain begins to perform that action automatically. This process helps people save mental energy because they do not need to make a decision every time they act.

Researchers often describe habit formation as a cycle that includes a cue, a routine, and a reward. A cue is a signal that triggers a behaviour. The routine is the action itself, and the reward is the benefit that follows the action. Over time, the brain begins to expect the reward and repeats the routine whenever the cue appears.

Habits can be both helpful and harmful. Positive habits such as regular exercise or daily reading can improve health and knowledge. However, negative habits may develop if people repeat unhealthy behaviours.

SubQuestion No : 62

Q.6 Which of the following is the antonym of the word “regularly” as used in the passage?
2

Ans A. Occasionally

B. Habitually

C. Frequently

D. Consistently

Question Type :	MCQ
Question ID :	4410091821913
Option 1 ID :	4410097182762
Option 2 ID :	4410097182763
Option 3 ID :	4410097182760
Option 4 ID :	4410097182761
Status :	Answered
Chosen Option :	A

Comprehension:

Read the given passage carefully and answer the questions that follow.

Habits are actions that people perform regularly, often without thinking about them. Scientists explain that habits are formed through repetition. When a person repeats the same behaviour many times, the brain begins to perform that action automatically. This process helps people save mental energy because they do not need to make a decision every time they act.

Researchers often describe habit formation as a cycle that includes a cue, a routine, and a reward. A cue is a signal that triggers a behaviour. The routine is the action itself, and the reward is the benefit that follows the action. Over time, the brain begins to expect the reward and repeats the routine whenever the cue appears.

Habits can be both helpful and harmful. Positive habits such as regular exercise or daily reading can improve health and knowledge. However, negative habits may develop if people repeat unhealthy behaviours.

SubQuestion No : 63

Q.6 What does the passage describe as a cue in the habit cycle?
3

Ans A. The signal that triggers a behaviour

B. The result of repeating an action

C. The long-term effect of behaviour

D. The reward received after an action

Question Type :	MCQ
Question ID :	4410091821914
Option 1 ID :	4410097182767
Option 2 ID :	4410097182765
Option 3 ID :	4410097182766
Option 4 ID :	4410097182764
Status :	Answered
Chosen Option :	A

Comprehension:

Read the given passage carefully and answer the questions that follow.

Habits are actions that people perform regularly, often without thinking about them. Scientists explain that habits are formed through repetition. When a person repeats the same behaviour many times, the brain begins to perform that action automatically. This process helps people save mental energy because they do not need to make a decision every time they act.

Researchers often describe habit formation as a cycle that includes a cue, a routine, and a reward. A cue is a signal that triggers a behaviour. The routine is the action itself, and the reward is the benefit that follows the action. Over time, the brain begins to expect the reward and repeats the routine whenever the cue appears.

Habits can be both helpful and harmful. Positive habits such as regular exercise or daily reading can improve health and knowledge. However, negative habits may develop if people repeat unhealthy behaviours.

SubQuestion No : 64

Q.6 According to the passage, how are habits mainly formed?
4

- Ans**
- A. Through sudden changes in behaviour
 - B. Through natural talent and intelligence
 - C. Through repeated actions over time
 - D. Through random daily experiences

Question Type :	MCQ
Question ID :	4410091821915
Option 1 ID :	4410097182770
Option 2 ID :	4410097182768
Option 3 ID :	4410097182771
Option 4 ID :	4410097182769
Status :	Answered
Chosen Option :	C

Comprehension:

Read the given passage carefully and answer the questions that follow.

Habits are actions that people perform regularly, often without thinking about them. Scientists explain that habits are formed through repetition. When a person repeats the same behaviour many times, the brain begins to perform that action automatically. This process helps people save mental energy because they do not need to make a decision every time they act.

Researchers often describe habit formation as a cycle that includes a cue, a routine, and a reward. A cue is a signal that triggers a behaviour. The routine is the action itself, and the reward is the benefit that follows the action. Over time, the brain begins to expect the reward and repeats the routine whenever the cue appears.

Habits can be both helpful and harmful. Positive habits such as regular exercise or daily reading can improve health and knowledge. However, negative habits may develop if people repeat unhealthy behaviours.

SubQuestion No : 65

Q.6 What is the author's tone in the passage?
5

Ans A. Informative and balanced

B. Critical and disapproving

C. Emotional and dramatic

D. Humorous and playful

Question Type : **MCQ**

Question ID : **4410091821916**

Option 1 ID : **4410097182774**

Option 2 ID : **4410097182773**

Option 3 ID : **4410097182775**

Option 4 ID : **4410097182772**

Status : **Answered**

Chosen Option : **A**

Section : **Odia**

Q.6 ନିମ୍ନରେ ଦିଆଯାଇଥିବା ବିକଳ୍ପ ମଧ୍ୟରୁ ଉପଯୁକ୍ତ ବିପରୀତ ଶବ୍ଦ ଚୟନ କରନ୍ତୁ।
6 ନିଷ୍ପତ୍ତି

Ans A. ବ୍ରୋଧୀ

B. ଦୟାବାନ

C. ଅମଙ୍ଗଳକାମୀ

D. ଅତ୍ୟାଚାରୀ

Question Type : **MCQ**

Question ID : **4410091241158**

Option 1 ID : **4410094897986**

Option 2 ID : **4410094897988**

Option 3 ID : **4410094897989**

Option 4 ID : **4410094897987**

Status : **Answered**

Chosen Option : **B**

Q.6 7	ନିମ୍ନରେ ଦିଆଯାଇଥିବା ବିକଳ୍ପ ମଧ୍ୟରୁ ଉପଯୁକ୍ତ ସମାନ୍ତରାଳକ ଶବ୍ଦ ଚୟନ କରନ୍ତୁ ମନୋହର
Ans	<input checked="" type="checkbox"/> A. ଅପବିତ୍ର
	<input checked="" type="checkbox"/> B. ଅସୁନ୍ଦର
	<input checked="" type="checkbox"/> C. ସୁନ୍ଦର
	<input checked="" type="checkbox"/> D. ଅନ୍ଧାର

Question Type :	MCQ
Question ID :	4410091080842
Option 1 ID :	4410094260583
Option 2 ID :	4410094260584
Option 3 ID :	4410094260582
Option 4 ID :	4410094260585
Status :	Answered
Chosen Option :	C

Q.6 8	ରାଧା ଓ ମଧୁ ମଧ୍ୟରେ ରାଧା _____ ବଳୁଆ । ଶୂନ୍ୟ ସ୍ଥାନରେ ନିମ୍ନଲିଖିତ ମଧ୍ୟରୁ ଠିକ୍ ବିଶେଷଣଟି ଲେଖି ବାକ୍ୟଟି ସମ୍ପୂର୍ଣ୍ଣ କର ।
Ans	<input checked="" type="checkbox"/> A. ବେଷୀ
	<input checked="" type="checkbox"/> B. ବେସି
	<input checked="" type="checkbox"/> C. ବେଶି
	<input checked="" type="checkbox"/> D. ବେଶୀ

Question Type :	MCQ
Question ID :	4410091452538
Option 1 ID :	4410095738534
Option 2 ID :	4410095738533
Option 3 ID :	4410095738532
Option 4 ID :	4410095738535
Status :	Answered
Chosen Option :	D

Q.6 9	ସେ ଗତ ବର୍ଷ ଲଣ୍ଡନ _____ ।
Ans	<input checked="" type="checkbox"/> A. ଯାଇଥିଲି
	<input checked="" type="checkbox"/> B. ଯାଇଛନ୍ତି
	<input checked="" type="checkbox"/> C. ଯାଇଥିଲେ
	<input checked="" type="checkbox"/> D. ଯାଉଛନ୍ତି

Question Type :	MCQ
Question ID :	4410091675625
Option 1 ID :	4410096611328
Option 2 ID :	4410096611331
Option 3 ID :	4410096611329
Option 4 ID :	4410096611330
Status :	Answered
Chosen Option :	C

Q.7 0	ଦିଆଯାଇଥିବା ଓଡ଼ିଆ ବାକ୍ୟକୁ ଇଂରାଜୀରେ ଅନୁବାଦ କର। ଆଲୁଅ ଲିଭି ଯାଇଛି ଏବଂ ସବୁ ଅନ୍ଧର ହୋଇଯାଇଛି
Ans	<input checked="" type="checkbox"/> A. The light had gone out and everything has become dark.
	<input checked="" type="checkbox"/> B. The light will go out and everything becomes dark.
	<input checked="" type="checkbox"/> C. The light has gone out and everything has become dark.
	<input checked="" type="checkbox"/> D. The light goes out and everything has become dark.

Question Type :	MCQ
Question ID :	4410091134692
Option 1 ID :	4410094474066
Option 2 ID :	4410094474068
Option 3 ID :	4410094474067
Option 4 ID :	4410094474065
Status :	Answered
Chosen Option :	D

Q.7 1	ସେ ପ୍ରତିଦିନ ସ୍କୁଲକୁ _____ ।
Ans	<input checked="" type="checkbox"/> A. ଯାଇଛି
	<input checked="" type="checkbox"/> B. ଶଲେ
	<input checked="" type="checkbox"/> C. ଗଲା
	<input checked="" type="checkbox"/> D. ଯାଏ

Question Type :	MCQ
Question ID :	4410091675530
Option 1 ID :	4410096611105
Option 2 ID :	4410096611107
Option 3 ID :	4410096611106
Option 4 ID :	4410096611104
Status :	Answered
Chosen Option :	D

Q.7 2	ଦିଆଯାଇଥିବା ଇଂରାଜୀ ବାକ୍ୟକୁ ଓଡ଼ିଆରେ ଅନୁବାଦ କର। The tailor stitched my new shirt very neatly and fast.
Ans	<input checked="" type="checkbox"/> A. ଦର୍ଜୀ ମୋର ନୂତନ ସାର୍ଟକୁ ବହୁତ ସୁନ୍ଦର ଭାବରେ ଓ ଶୀଘ୍ର ସିଲେଇ କଲା।
	<input checked="" type="checkbox"/> B. ଦର୍ଜୀ ମୋର ନୂତନ ସାର୍ଟକୁ ଖୁବ୍ ଶୀଘ୍ର ସିଲେଇ କଲା।
	<input checked="" type="checkbox"/> C. କମ୍ପାର ମୋର ନୂତନ ସାର୍ଟକୁ ବହୁତ ସୁନ୍ଦର ଓ ଶୀଘ୍ର ସିଲେଇ କଲା।
	<input checked="" type="checkbox"/> D. ଦର୍ଜୀ ମୋର ପୁରୁଣା ପ୍ୟାଣ୍ଟକୁ ବହୁତ ସୁନ୍ଦର ଓ ଶୀଘ୍ର ସିଲେଇ କଲା।

Question Type :	MCQ
Question ID :	4410091135182
Option 1 ID :	4410094476000
Option 2 ID :	4410094476001
Option 3 ID :	4410094475999
Option 4 ID :	4410094476002
Status :	Answered
Chosen Option :	A

Q.7 ନିମ୍ନରେ ଦିଆଯାଇଥିବା ବିକଳ୍ପ ମଧ୍ୟରୁ ଉପଯୁକ୍ତ ବିପରୀତ ଶବ୍ଦ ଚୟନ କରନ୍ତୁ
3 ମୃତ

- Ans A. ପର
- B. ମୃତ୍ୟୁ
- C. ଜୀବ
- D. ଜଗତ

Question Type : MCQ

Question ID : 4410091676057

Option 1 ID : 4410096613050

Option 2 ID : 4410096613049

Option 3 ID : 4410096613048

Option 4 ID : 4410096613051

Status : Answered

Chosen Option : C

Q.7 ଦିଆଯାଇଥିବା ଇଂରାଜୀ ବାକ୍ୟକୁ ଓଡ଼ିଆରେ ଅନୁବାଦ କର।
4

If you play mischief you will face the music.

- Ans A. ଯଦି ତୁମେ ଦୁଷ୍ଟାମି କର, ତେବେ ତୁମେ ଏହାର ଫଳ ଭୋଗିବ
- B. ଯଦି ତୁମେ ଦୁଷ୍ଟାମି କରିଛ, ତେବେ ତୁମେ ଭୋଗିବ।
- C. ତୁମେ ଦୁଷ୍ଟାମି କଲେ ଏହାର ଫଳ ଭୋଗିଛ।
- D. ଯଦି ତୁମେ ଦୁଷ୍ଟାମି କରିଥିଲ, ତେବେ ତୁମେ ଭୋଗିବ।

Question Type : MCQ

Question ID : 4410091233156

Option 1 ID : 4410094866325

Option 2 ID : 4410094866322

Option 3 ID : 4410094866323

Option 4 ID : 4410094866324

Status : Answered

Chosen Option : A

Q.7 ଗରାଖ' କେଉଁ ପ୍ରକାରର ଶବ୍ଦ?
5

- Ans A. ଚଭବ
- B. ଦେଶଜ
- C. ବିଦେଶଜ
- D. ଚସ୍ତମ

Question Type : MCQ

Question ID : 4410091194267

Option 1 ID : 4410094710983

Option 2 ID : 4410094710984

Option 3 ID : 4410094710985

Option 4 ID : 4410094710982

Status : Not Answered

Chosen Option : --

Comprehension:

ନିମ୍ନ ଅନୁଛେଦଟିକୁ ପାଠ କରି ପ୍ରଦତ୍ତ ପ୍ରଶ୍ନଗୁଡ଼ିକର ଉତ୍ତର ଲେଖ।

ବାହାର ଖେଳ ଛାତ୍ରଛାତ୍ରୀଙ୍କ ପାଇଁ ଗୁରୁତ୍ୱପୂର୍ଣ୍ଣ ଅଂଶ। ଏହି ଖେଳ ଶାରୀରିକ ସ୍ୱାସ୍ଥ୍ୟ, ସହଯୋଗ ଓ ଦଳୀୟ କୌଶଳକୁ ବୃଦ୍ଧି କରେ। ଫୁଟବଲ୍, କ୍ରିକେଟ୍, ହାଣ୍ଡବଲ୍ ଏବଂ ବାଡ଼ିଫିଲ୍ ଖେଳ ଛାତ୍ରଛାତ୍ରୀଙ୍କର ପସନ୍ଦର ଖେଳ ଅଟେ।

ଏହି ଖେଳ ଲୋକମାନେ ସାମାଜିକ ମିଳନ ଓ ସମ୍ମିଳନ ଦ୍ୱାରା ସମାଜରେ ମିଳିତାକୁ ବଢ଼ାଇ ଦିଏ। ଖେଳ ମାନସିକ ଦବାବ ହ୍ରାସ କରି ସ୍ୱାସ୍ଥ୍ୟକୁ ଉନ୍ନତ କରେ। ଗ୍ରାମ ଏବଂ ସହରରେ ଖେଳ ପାଇଁ ମୌକା ଦେଇ ଶିଶୁମାନେ ଦୃଢ଼ ଓ ଉତ୍ସାହୀ ହୁଅନ୍ତି।

ବାହାର ଖେଳ ଛାତ୍ରଛାତ୍ରୀଙ୍କ ପାଇଁ ମଜାଦାର ଓ ସିଖିବା ଅବସର ମଧ୍ୟ ଦିଏ। ଏହା ଛାତ୍ରମାନଙ୍କର ଶାରୀରିକ ଶକ୍ତି ବୃଦ୍ଧି କରିଥାଏ, ମନୋବଳକୁ ଶକ୍ତିଶାଳୀ କରେ ଓ ଦଳୀୟ କୌଶଳକୁ ସୁଦୃଢ଼ କରେ।

ସମ୍ପୂର୍ଣ୍ଣ ଭାବରେ, ବାହାର ଖେଳ ଶିଶୁମାନଙ୍କ ପାଇଁ ଶିକ୍ଷା, ସ୍ୱାସ୍ଥ୍ୟ ଓ ସାମାଜିକ ସମ୍ମିଳନର ଗୁରୁତ୍ୱପୂର୍ଣ୍ଣ ଅଂଶ।

SubQuestion No : 76

Q.7 ଅନୁଛେଦର ଗଢ଼ଣ ଚିହ୍ନଟ କର।

Ans A. ବର୍ଣ୍ଣନାତ୍ମକ

B. ଆଲୋଚନାତ୍ମକ

C. ରୋମାଞ୍ଚକ

D. ବିବେଚନାତ୍ମକ

Question Type : MCQ

Question ID : 4410091486155

Option 1 ID : 4410095871052

Option 2 ID : 4410095871055

Option 3 ID : 4410095871054

Option 4 ID : 4410095871053

Status : Answered

Chosen Option : B

Comprehension:

ନିମ୍ନ ଅନୁଛେଦଟିକୁ ପାଠ କରି ପ୍ରଦତ୍ତ ପ୍ରଶ୍ନଗୁଡ଼ିକର ଉତ୍ତର ଲେଖ।

ବାହାର ଖେଳ ଛାତ୍ରଛାତ୍ରୀଙ୍କ ପାଇଁ ଗୁରୁତ୍ୱପୂର୍ଣ୍ଣ ଅଂଶ। ଏହି ଖେଳ ଶାରୀରିକ ସ୍ୱାସ୍ଥ୍ୟ, ସହଯୋଗ ଓ ଦଳୀୟ କୌଶଳକୁ ବୃଦ୍ଧି କରେ। ଫୁଟବଲ୍, କ୍ରିକେଟ୍, ହାଣ୍ଡବଲ୍ ଏବଂ ବାଡ଼ିଫିଲ୍ ଖେଳ ଛାତ୍ରଛାତ୍ରୀଙ୍କର ପସନ୍ଦର ଖେଳ ଅଟେ।

ଏହି ଖେଳ ଲୋକମାନେ ସାମାଜିକ ମିଳନ ଓ ସମ୍ମିଳନ ଦ୍ୱାରା ସମାଜରେ ମିଳିତାକୁ ବଢ଼ାଇ ଦିଏ। ଖେଳ ମାନସିକ ଦବାବ ହ୍ରାସ କରି ସ୍ୱାସ୍ଥ୍ୟକୁ ଉନ୍ନତ କରେ। ଗ୍ରାମ ଏବଂ ସହରରେ ଖେଳ ପାଇଁ ମୌକା ଦେଇ ଶିଶୁମାନେ ଦୃଢ଼ ଓ ଉତ୍ସାହୀ ହୁଅନ୍ତି।

ବାହାର ଖେଳ ଛାତ୍ରଛାତ୍ରୀଙ୍କ ପାଇଁ ମଜାଦାର ଓ ସିଖିବା ଅବସର ମଧ୍ୟ ଦିଏ। ଏହା ଛାତ୍ରମାନଙ୍କର ଶାରୀରିକ ଶକ୍ତି ବୃଦ୍ଧି କରିଥାଏ, ମନୋବଳକୁ ଶକ୍ତିଶାଳୀ କରେ ଓ ଦଳୀୟ କୌଶଳକୁ ସୁଦୃଢ଼ କରେ।

ସମ୍ପୂର୍ଣ୍ଣ ଭାବରେ, ବାହାର ଖେଳ ଶିଶୁମାନଙ୍କ ପାଇଁ ଶିକ୍ଷା, ସ୍ୱାସ୍ଥ୍ୟ ଓ ସାମାଜିକ ସମ୍ମିଳନର ଗୁରୁତ୍ୱପୂର୍ଣ୍ଣ ଅଂଶ।

SubQuestion No : 77

Q.7 ଅନୁଛେଦରୁ ନିଆଯାଇଥିବା ଉଦାହରଣଗୁଡ଼ିକୁ ଚିହ୍ନଟ କର।

Ans A. ଗାନ ଓ ନୃତ୍ୟ

B. ଖାଦ୍ୟ ପାନୀ

C. ଫୁଟବଲ୍, କ୍ରିକେଟ୍, ହାଣ୍ଡବଲ୍

D. ବିଦ୍ୟାଳୟ ଗୁରୁତ୍ୱ

Question Type : MCQ

Question ID : 4410091486156

Option 1 ID : 4410095871058

Option 2 ID : 4410095871057

Option 3 ID : 4410095871056

Option 4 ID : 4410095871059

Status : Answered

Chosen Option : C

Comprehension:

ନିମ୍ନ ଅନୁଲେଖନକୁ ପାଠ କରି ପ୍ରଦତ୍ତ ପ୍ରଶ୍ନଗୁଡ଼ିକର ଉତ୍ତର ଲେଖ।

ବାହାର ଖେଳ ଛାତ୍ରଛାତ୍ରୀଙ୍କ ପାଇଁ ଗୁରୁତ୍ୱପୂର୍ଣ୍ଣ ଅଂଶ। ଏହି ଖେଳ ଶାରୀରିକ ସ୍ୱାସ୍ଥ୍ୟ, ସହଯୋଗ ଓ ଦଳୀୟ କୌଶଳକୁ ବୃଦ୍ଧି କରେ। ଫୁଟବଲ୍, କ୍ରିକେଟ୍, ହାଣ୍ଡବଲ୍ ଏବଂ ବାଡ଼ିଫିଲ୍ ଖେଳ ଛାତ୍ରଛାତ୍ରୀଙ୍କର ପସନ୍ଦର ଖେଳ ଅଟେ।

ଏହି ଖେଳ ଲୋକମାନେ ସାମାଜିକ ମିଳନ ଓ ସମ୍ମିଳନ ଦ୍ୱାରା ସମାଜରେ ମିଳିତାକୁ ବଢ଼ାଇ ଦିଏ। ଖେଳ ମାନସିକ ଦବାବ ହ୍ରାସ କରି ସ୍ୱାସ୍ଥ୍ୟକୁ ଉନ୍ନତ କରେ। ଗ୍ରାମ ଏବଂ ସହରରେ ଖେଳ ପାଇଁ ମୌକା ଦେଇ ଶିଶୁମାନେ ଦୃଢ଼ ଓ ଉତ୍ସାହୀ ହୁଅନ୍ତି।

ବାହାର ଖେଳ ଛାତ୍ରଛାତ୍ରୀଙ୍କ ପାଇଁ ମଜାଦାର ଓ ସିଖିବା ଅବସର ମଧ୍ୟ ଦିଏ। ଏହା ଛାତ୍ରମାନଙ୍କର ଶାରୀରିକ ଶକ୍ତି ବୃଦ୍ଧି କରିଥାଏ, ମନୋବଳକୁ ଶକ୍ତିଶାଳୀ କରେ ଓ ଦଳୀୟ କୌଶଳକୁ ସୁଦୃଢ଼ କରେ।

ସମ୍ପୂର୍ଣ୍ଣ ଭାବରେ, ବାହାର ଖେଳ ଶିଶୁମାନଙ୍କ ପାଇଁ ଶିକ୍ଷା, ସ୍ୱାସ୍ଥ୍ୟ ଓ ସାମାଜିକ ସମ୍ମିଳନର ଗୁରୁତ୍ୱପୂର୍ଣ୍ଣ ଅଂଶ।

SubQuestion No : 78

Q.7 ବାସ୍ତବ ଜୀବନ ପରିସ୍ଥିତି ସହିତ ସମ୍ବନ୍ଧ ଉପଯୁକ୍ତ ସଂଯୋଗ କଣ?

Ans

A. ଛାତ୍ରମାନେ ବସ୍ତୁ ନିର୍ମାଣ କରନ୍ତି।

B. ଛାତ୍ରମାନେ ବାହାରେ ଖେଳି ଶାରୀରିକ ଏବଂ ମାନସିକ ଶକ୍ତି ବୃଦ୍ଧି କରନ୍ତି।

C. ଛାତ୍ରମାନେ କେବଳ ଖାଦ୍ୟ ଖାନ୍ତି।

D. ଛାତ୍ରମାନେ ଗୀତ ଶିଖନ୍ତି।

Question Type : MCQ

Question ID : 4410091486157

Option 1 ID : 4410095871061

Option 2 ID : 4410095871060

Option 3 ID : 4410095871062

Option 4 ID : 4410095871063

Status : Answered

Chosen Option : B

Comprehension:

ନିମ୍ନ ଅନୁଲେଖନକୁ ପାଠ କରି ପ୍ରଦତ୍ତ ପ୍ରଶ୍ନଗୁଡ଼ିକର ଉତ୍ତର ଲେଖ।

ବାହାର ଖେଳ ଛାତ୍ରଛାତ୍ରୀଙ୍କ ପାଇଁ ଗୁରୁତ୍ୱପୂର୍ଣ୍ଣ ଅଂଶ। ଏହି ଖେଳ ଶାରୀରିକ ସ୍ୱାସ୍ଥ୍ୟ, ସହଯୋଗ ଓ ଦଳୀୟ କୌଶଳକୁ ବୃଦ୍ଧି କରେ। ଫୁଟବଲ୍, କ୍ରିକେଟ୍, ହାଣ୍ଡବଲ୍ ଏବଂ ବାଡ଼ିଫିଲ୍ ଖେଳ ଛାତ୍ରଛାତ୍ରୀଙ୍କର ପସନ୍ଦର ଖେଳ ଅଟେ।

ଏହି ଖେଳ ଲୋକମାନେ ସାମାଜିକ ମିଳନ ଓ ସମ୍ମିଳନ ଦ୍ୱାରା ସମାଜରେ ମିଳିତାକୁ ବଢ଼ାଇ ଦିଏ। ଖେଳ ମାନସିକ ଦବାବ ହ୍ରାସ କରି ସ୍ୱାସ୍ଥ୍ୟକୁ ଉନ୍ନତ କରେ। ଗ୍ରାମ ଏବଂ ସହରରେ ଖେଳ ପାଇଁ ମୌକା ଦେଇ ଶିଶୁମାନେ ଦୃଢ଼ ଓ ଉତ୍ସାହୀ ହୁଅନ୍ତି।

ବାହାର ଖେଳ ଛାତ୍ରଛାତ୍ରୀଙ୍କ ପାଇଁ ମଜାଦାର ଓ ସିଖିବା ଅବସର ମଧ୍ୟ ଦିଏ। ଏହା ଛାତ୍ରମାନଙ୍କର ଶାରୀରିକ ଶକ୍ତି ବୃଦ୍ଧି କରିଥାଏ, ମନୋବଳକୁ ଶକ୍ତିଶାଳୀ କରେ ଓ ଦଳୀୟ କୌଶଳକୁ ସୁଦୃଢ଼ କରେ।

ସମ୍ପୂର୍ଣ୍ଣ ଭାବରେ, ବାହାର ଖେଳ ଶିଶୁମାନଙ୍କ ପାଇଁ ଶିକ୍ଷା, ସ୍ୱାସ୍ଥ୍ୟ ଓ ସାମାଜିକ ସମ୍ମିଳନର ଗୁରୁତ୍ୱପୂର୍ଣ୍ଣ ଅଂଶ।

SubQuestion No : 79

Q.7 ବିପରୀତ ଶବ୍ଦ (Antonym) – “ଶକ୍ତିଶାଳୀ”

9

Ans

A. ସୁସ୍ଥ

B. ଦୃଢ଼

C. ଦୁର୍ବଳ

D. ଶକ୍ତିମାନ

Question Type : MCQ

Question ID : 4410091486158

Option 1 ID : 4410095871067

Option 2 ID : 4410095871065

Option 3 ID : 4410095871064

Option 4 ID : 4410095871066

Status : Answered

Chosen Option : C

Comprehension:

ନିମ୍ନ ଅନୁଲେଖନକୁ ପାଠ କରି ପ୍ରଦତ୍ତ ପ୍ରଶ୍ନଗୁଡ଼ିକର ଉତ୍ତର ଲେଖ।

ବାହାର ଖେଳ ଛାତ୍ରଛାତ୍ରୀଙ୍କ ପାଇଁ ଗୁରୁତ୍ୱପୂର୍ଣ୍ଣ ଅଂଶ। ଏହି ଖେଳ ଶାରୀରିକ ସ୍ୱାସ୍ଥ୍ୟ, ସହଯୋଗ ଓ ଦଳୀୟ କୌଶଳକୁ ବୃଦ୍ଧି କରେ। ଫୁଟବଲ୍, କ୍ରିକେଟ୍, ହାଣ୍ଡବଲ୍ ଏବଂ ବାଡ଼ିଫିଲ୍ ଖେଳ ଛାତ୍ରଛାତ୍ରୀଙ୍କର ପସନ୍ଦର ଖେଳ ଅଟେ।

ଏହି ଖେଳ ଲୋକମାନେ ସାମାଜିକ ମିଳନ ଓ ସମ୍ମିଳନ ଦ୍ୱାରା ସମାଜରେ ମିଳିତାକୁ ବଢ଼ାଇ ଦିଏ। ଖେଳ ମାନସିକ ଦବାବ ହ୍ରାସ କରି ସ୍ୱାସ୍ଥ୍ୟକୁ ଉନ୍ନତ କରେ। ଗ୍ରାମ ଏବଂ ସହରରେ ଖେଳ ପାଇଁ ମୌକା ଦେଇ ଶିଶୁମାନେ ଦୃଢ଼ ଓ ଉତ୍ସାହୀ ହୁଅନ୍ତି।

ବାହାର ଖେଳ ଛାତ୍ରଛାତ୍ରୀଙ୍କ ପାଇଁ ମଜାଦାର ଓ ସିଖିବା ଅବସର ମଧ୍ୟ ଦିଏ। ଏହା ଛାତ୍ରମାନଙ୍କର ଶାରୀରିକ ଶକ୍ତି ବୃଦ୍ଧି କରିଥାଏ, ମନୋବଳକୁ ଶକ୍ତିଶାଳୀ କରେ ଓ ଦଳୀୟ କୌଶଳକୁ ସୁଦୃଢ଼ କରେ।

ସମ୍ପୂର୍ଣ୍ଣ ଭାବରେ, ବାହାର ଖେଳ ଶିଶୁମାନଙ୍କ ପାଇଁ ଶିକ୍ଷା, ସ୍ୱାସ୍ଥ୍ୟ ଓ ସାମାଜିକ ସମ୍ମିଳନର ଗୁରୁତ୍ୱପୂର୍ଣ୍ଣ ଅଂଶ।

SubQuestion No : 80

Q.8 ଶବ୍ଦାର୍ଥ (Meaning of Word) – “ଗୁରୁତ୍ୱପୂର୍ଣ୍ଣ”

- Ans**
- A. ଅନମୂଲ୍ୟ
 - B. ମହତ୍ତ୍ୱପୂର୍ଣ୍ଣ
 - C. ସରଳ
 - D. ଛୋଟ

Question Type :	MCQ
Question ID :	4410091486159
Option 1 ID :	4410095871069
Option 2 ID :	4410095871070
Option 3 ID :	4410095871068
Option 4 ID :	4410095871071
Status :	Answered
Chosen Option :	B

Section : Computer

Q.8 Which of the following is considered a type of computer security?

- Ans**
- A. Cleaning the Keyboard
 - B. Upgrading the Monitor
 - C. Antivirus Software
 - D. Adding More RAM

Question Type :	MCQ
Question ID :	4410091446888
Option 1 ID :	4410095716203
Option 2 ID :	4410095716204
Option 3 ID :	4410095716202
Option 4 ID :	4410095716205
Status :	Answered
Chosen Option :	C

Q.8 Which of the following terms refers to the complete address that specifies where an internet resource, such as a webpage, is located?

- Ans**
- A. Internet Service Provider
 - B. Uniform Resource Locator
 - C. Digital Signature
 - D. Hypertext Transfer Protocol

Question Type :	MCQ
Question ID :	4410091426066
Option 1 ID :	4410095632851
Option 2 ID :	4410095632854
Option 3 ID :	4410095632852
Option 4 ID :	4410095632853
Status :	Answered
Chosen Option :	B

Q.8 Which type of computer memory is volatile and loses its contents when power is switched off?

- Ans**
- A. ROM
 - B. Hard Disk
 - C. CD-ROM
 - D. RAM

Question Type :	MCQ
Question ID :	4410091437787
Option 1 ID :	4410095679857
Option 2 ID :	4410095679859
Option 3 ID :	4410095679860
Option 4 ID :	4410095679858
Status :	Answered
Chosen Option :	D

Q.8 What is the primary purpose of a digital signature in electronic communication?

- Ans**
- A. To increase file download speed
 - B. To decorate a document with a symbol
 - C. To verify the authenticity and integrity of an electronic document
 - D. To encrypt multimedia files

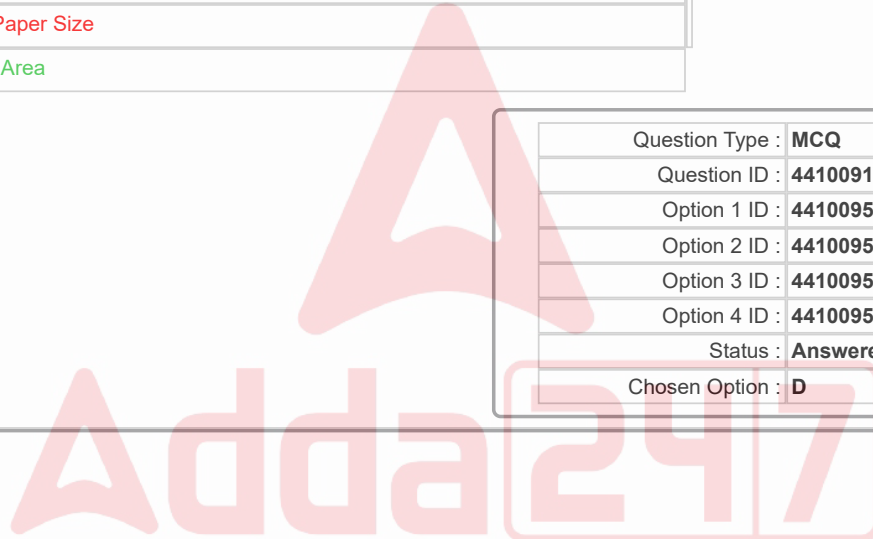
Question Type :	MCQ
Question ID :	4410091467487
Option 1 ID :	4410095797850
Option 2 ID :	4410095797847
Option 3 ID :	4410095797848
Option 4 ID :	4410095797849
Status :	Answered
Chosen Option :	C

Q.8 5	Identify the tab that contains the alignment tools in MS Word.
Ans	<input type="checkbox"/> A. Insert
	<input checked="" type="checkbox"/> B. Home
	<input type="checkbox"/> C. View
	<input type="checkbox"/> D. Review

Question Type :	MCQ
Question ID :	4410091450395
Option 1 ID :	4410095730094
Option 2 ID :	4410095730095
Option 3 ID :	4410095730096
Option 4 ID :	4410095730097
Status :	Answered
Chosen Option :	B

Q.8 6	In MS Excel 2021, if a student only wants to print a specific block of data instead of the entire worksheet, what setting must they specify before sending the document to the printer?
Ans	<input type="checkbox"/> A. Adjust the Page Margins
	<input type="checkbox"/> B. Use Landscape Orientation
	<input type="checkbox"/> C. Change the Paper Size
	<input checked="" type="checkbox"/> D. Set the Print Area

Question Type :	MCQ
Question ID :	4410091422100
Option 1 ID :	4410095617290
Option 2 ID :	4410095617291
Option 3 ID :	4410095617288
Option 4 ID :	4410095617289
Status :	Answered
Chosen Option :	D



Q.8 In MS Excel 365, a spreadsheet contains student records across three adjacent columns: A (Roll Number), B (Student Name), and C (Total Marks). A user selects only the data cells in column C (Total Marks) and then attempts to sort the selected column in Descending order (Largest to Smallest).

Excel immediately displays a **Sort Warning dialog**. Which of the following describes the primary risk that the dialog is designed to prevent, and what is the correct corresponding action to take to maintain the integrity of the data?

- Ans**
- A. The risk is that the column header will be included in the sort operation. The correct action is to select Continue with the current selection to sort only the data cells and then use Custom Sort to confirm the "My data has headers" option.
 - B. The risk is that hidden rows or columns are present in the dataset. The correct action is to select Clear Filters from the Data tab, as the warning is often a sign of an active filter affecting the visible range.
 - C. The risk is that the sort key contains mixed text and number formats. The correct action is to select Continue with the current selection and then use the Text to Columns feature to standardize the data format.
 - D. The risk is that the row-level data integrity will be compromised because the related student information (Roll Number and Name) will not move with the sorted Marks. The correct action is to select Expand the selection.

Question Type :	MCQ
Question ID :	4410091430965
Option 1 ID :	4410095652171
Option 2 ID :	4410095652169
Option 3 ID :	4410095652168
Option 4 ID :	4410095652170
Status :	Answered
Chosen Option :	C

Q.8 What is the main purpose of businesses using social media platforms?

- Ans**
- A. Engaging with customers and promoting products
 - B. Streaming movies
 - C. Playing online games
 - D. Saving personal files

Question Type :	MCQ
Question ID :	4410091453010
Option 1 ID :	4410095740349
Option 2 ID :	4410095740350
Option 3 ID :	4410095740348
Option 4 ID :	4410095740351
Status :	Answered
Chosen Option :	A

Q.8	Which command in MS Word 2020 is used to create a new blank document?
9	
Ans	<input checked="" type="checkbox"/> A. Print Document
	<input checked="" type="checkbox"/> B. Save Document
	<input checked="" type="checkbox"/> C. Open Document
	<input checked="" type="checkbox"/> D. New Document

Question Type :	MCQ
Question ID :	4410091447676
Option 1 ID :	4410095719313
Option 2 ID :	4410095719312
Option 3 ID :	4410095719311
Option 4 ID :	4410095719310
Status :	Answered
Chosen Option :	D

Q.9	Which is a system of receiving, sending, and storing electronic messages?
0	
Ans	<input checked="" type="checkbox"/> A. Message
	<input checked="" type="checkbox"/> B. Communicate
	<input checked="" type="checkbox"/> C. Information
	<input checked="" type="checkbox"/> D. Email

Question Type :	MCQ
Question ID :	4410091449612
Option 1 ID :	4410095726916
Option 2 ID :	4410095726917
Option 3 ID :	4410095726918
Option 4 ID :	4410095726919
Status :	Answered
Chosen Option :	D

Q.9	What was Microsoft Windows' initial release version?
1	
Ans	<input checked="" type="checkbox"/> A. Windows XP
	<input checked="" type="checkbox"/> B. MS-DOS
	<input checked="" type="checkbox"/> C. Windows 1.0
	<input checked="" type="checkbox"/> D. Windows 95

Question Type :	MCQ
Question ID :	4410091420657
Option 1 ID :	4410095611545
Option 2 ID :	4410095611547
Option 3 ID :	4410095611546
Option 4 ID :	4410095611544
Status :	Answered
Chosen Option :	B

Q.9 Which of the following statements about the **Windows Operating System** is **TRUE**?
2

- Ans**
- A. Windows uses a command-line interface only and does not support multitasking.
 - B. Windows cannot run application software developed by third-party vendors.
 - C. Windows is a multitasking, multiuser, and GUI-based operating system.
 - D. Windows manages hardware resources but cannot support multiple users simultaneously.

Question Type :	MCQ
Question ID :	4410091414374
Option 1 ID :	4410095586463
Option 2 ID :	4410095586466
Option 3 ID :	4410095586465
Option 4 ID :	4410095586464
Status :	Answered
Chosen Option :	C

Q.9 Which of the following Refresh Rate from Avanced System Settings uses More power?
3

- Ans**
- A. 60.000Hz
 - B. 48.000Hz
 - C. 20.000Hz
 - D. 40.000Hz

Question Type :	MCQ
Question ID :	44100979157
Option 1 ID :	441009314492
Option 2 ID :	441009314491
Option 3 ID :	441009314490
Option 4 ID :	441009314493
Status :	Not Answered
Chosen Option :	--

Q.9 In PowerPoint 2021, where can you find or set the Default personal templates location?
4

- Ans**
- A. File → Options → Add-ins
 - B. File → Options → Advanced
 - C. File → Options → Save
 - D. File → Info → Manage Templates

Question Type :	MCQ
Question ID :	4410091450605
Option 1 ID :	4410095730881
Option 2 ID :	4410095730879
Option 3 ID :	4410095730878
Option 4 ID :	4410095730880
Status :	Answered
Chosen Option :	D

Q.9 5 Where can changes be made if user want all slides to use the same font style and color?

- Ans**
- A. In Notes View
 - B. In Slide Master View
 - C. In each text box
 - D. In Slide Sorter View

Question Type :	MCQ
Question ID :	4410091449780
Option 1 ID :	4410095727603
Option 2 ID :	4410095727601
Option 3 ID :	4410095727600
Option 4 ID :	4410095727602
Status :	Answered
Chosen Option :	D

Q.9 6 Identify the dialog box that contains advanced paragraph options like line spacing, indents, and pagination control.

- Ans**
- A. Columns Dialog Box
 - B. Font Dialog Box
 - C. Page Setup Dialog Box
 - D. Paragraph Dialog Box

Question Type :	MCQ
Question ID :	4410091450603
Option 1 ID :	4410095730871
Option 2 ID :	4410095730870
Option 3 ID :	4410095730872
Option 4 ID :	4410095730873
Status :	Answered
Chosen Option :	C

Q.9 7 What is the most common Windows tool for finding files and folders?

- Ans**
- A. Paint
 - B. File Explorer
 - C. Task Manager
 - D. Control Panel

Question Type :	MCQ
Question ID :	4410091425822
Option 1 ID :	4410095631894
Option 2 ID :	4410095631892
Option 3 ID :	4410095631893
Option 4 ID :	4410095631891
Status :	Answered
Chosen Option :	B

Test

Prime

By Adda247

Previous Year Papers PDF

PRACTICE MORE, SCORE HIGHER!



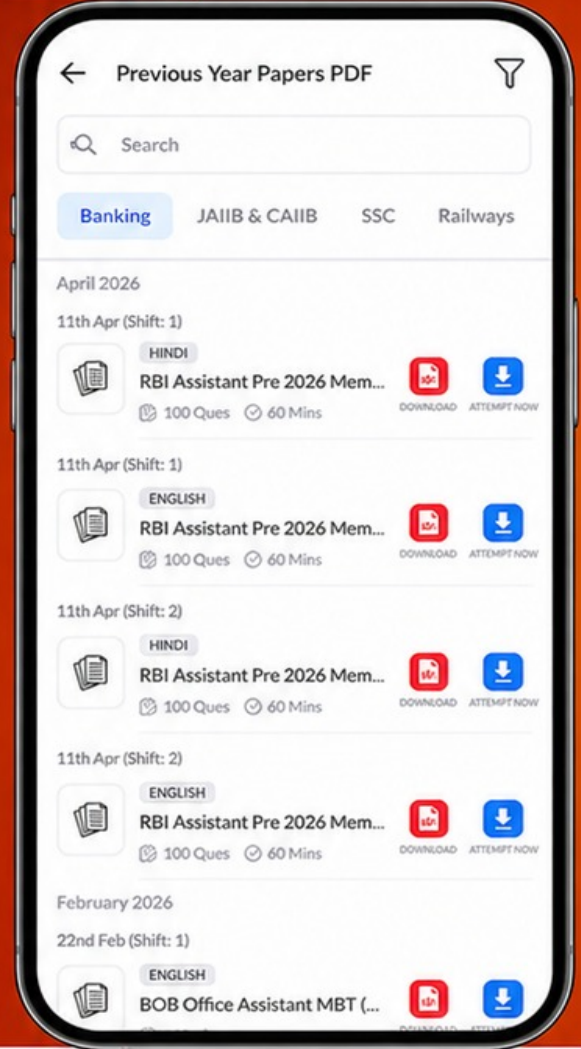
Free
25,000+
PDF's

High-Quality | Exam-Wise | Updated Regularly

ATTEMPT AS
MOCK



Turn PDFs into real exam experience.
Analyze. Improve. Succeed.



Topic-wise & Exam-wise PDFs



Download & Study Offline



Attempt as Mock & Track Score



Smart Analysis & Performance

AVAILABLE IN



Banking



SSC



Railway



Teaching



UGC



Agriculture



Nursing



Bihar



UP



Punjab



WB



Odisha



TN



AP & Telangana



Haryana



DOWNLOAD THE APP



Q.9	Which of the following is a result of poor computer security?
8	
Ans	<input checked="" type="checkbox"/> A. Increased efficiency
	<input checked="" type="checkbox"/> B. Data breach
	<input checked="" type="checkbox"/> C. Enhanced reliability
	<input checked="" type="checkbox"/> D. Improved network performance

Question Type :	MCQ
Question ID :	4410091441308
Option 1 ID :	4410095693883
Option 2 ID :	4410095693884
Option 3 ID :	4410095693886
Option 4 ID :	4410095693885
Status :	Answered
Chosen Option :	C

Q.9	Which view in MS PowerPoint allows you to see and manage all slides at once for easy rearranging or deleting?
9	
Ans	<input checked="" type="checkbox"/> A. Outline View
	<input checked="" type="checkbox"/> B. Reading View
	<input checked="" type="checkbox"/> C. Normal View
	<input checked="" type="checkbox"/> D. Slide Sorter View

Question Type :	MCQ
Question ID :	4410091459346
Option 1 ID :	4410095765518
Option 2 ID :	4410095765517
Option 3 ID :	4410095765515
Option 4 ID :	4410095765516
Status :	Answered
Chosen Option :	D

Q.1	Which formula in MS-Excel 365 generates a series of dates with monthly intervals starting from cell A1?
00	
Ans	<input checked="" type="checkbox"/> A. =A1+30
	<input checked="" type="checkbox"/> B. =TEXT(A1,"MMM")
	<input checked="" type="checkbox"/> C. =EDATE(A1,1)
	<input checked="" type="checkbox"/> D. =DATE(YEAR(A1),MONTH(A1)+1,DAY(A1))

Question Type :	MCQ
Question ID :	4410091447320
Option 1 ID :	4410095717907
Option 2 ID :	4410095717910
Option 3 ID :	4410095717908
Option 4 ID :	4410095717909
Status :	Answered
Chosen Option :	D