



Odisha Sub-ordinate Staff Selection Commission
(OSSSC), Govt. of Odisha

Participants Id	
Participant Name	
Test Date	16/04/2026
Test Time	9:00 AM - 10:30 AM
Subject	Conduct of Written Test for the posts of Forester, Forest Guard and Excise Constable under CRE 2025 II
Candidate Application Photo	
Candidate Registration Photo	

* Note

Correct Answer will carry 1 mark per Question.

Incorrect Answer will carry 0.25 Negative mark per Question.

- Options shown in green color with a tick icon are correct.
- Chosen option on the right of the question indicates the option selected by the candidate.

Section : Mathematics

**Test
Prime**

By Adda247

ALL EXAMS, ONE SUBSCRIPTION



Test. Analyze. Improve. Repeat.



Don't just *prepare*. *Perform*.

Test Prime — built only for mock tests.



1,50,000+
Mock Tests



25,000+
Previous Year Papers



800+
Exam Covered



500% Refund
on Selection



5 lakh+
Free Quizzes



Daily
Free PDFs



Job Alerts
Stay Updated

- Multilingual
- Detailed Solution
- Strong and Weak Areas



**All India
Rankings**

Compete with lakhs.
Rank. Improve. Repeat.



← Adda247 test prime

Rating ▾

Editors' choice

New



Adda247 Test Prime
Adda Education • Education
📌 Installed



DOWNLOAD THE APP

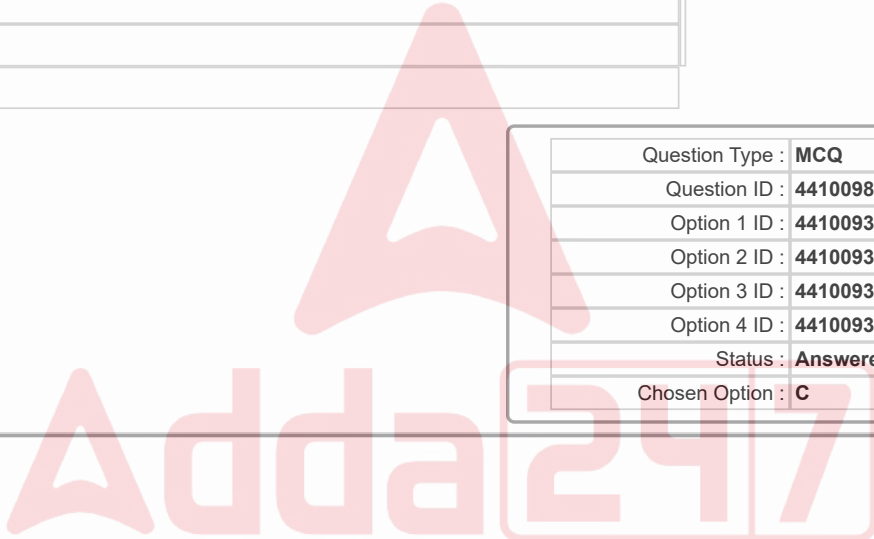


Q.1	The marks scored by 10 students are given below. 14, 19, 19, 20, 18, 10, 14, 11, 20, 19 The mode of the data is:4272
Ans	<input type="checkbox"/> A. 20
	<input type="checkbox"/> B. 18
	<input type="checkbox"/> C. 14
	<input checked="" type="checkbox"/> D. 19

Question Type :	MCQ
Question ID :	441009897585
Option 1 ID :	4410093544412
Option 2 ID :	4410093544413
Option 3 ID :	4410093544411
Option 4 ID :	4410093544410
Status :	Answered
Chosen Option :	D

Q.2	92% of the population of a village is 24,840. The total population of the village is:
Ans	<input type="checkbox"/> A. 35,256
	<input type="checkbox"/> B. 27,936
	<input checked="" type="checkbox"/> C. 27,000
	<input type="checkbox"/> D. 28,640

Question Type :	MCQ
Question ID :	441009857546
Option 1 ID :	4410093383159
Option 2 ID :	4410093383157
Option 3 ID :	4410093383156
Option 4 ID :	4410093383158
Status :	Answered
Chosen Option :	C



Q.3 If a manufacturer sells a table to a wholesaler at a gain of 4%, the wholesaler then sells it to a retailer at a gain of 20%, and finally the retailer sells it to the customer at a gain of 25%, determine the manufacturing cost (in ₹) of the table given that its final retail price is ₹42,900.

Ans ✓ A. 27,500

✗ B. 34,375

✗ C. 28,600

✗ D. 33,000

Question Type : **MCQ**

Question ID : **441009895019**

Option 1 ID : **4410093534146**

Option 2 ID : **4410093534149**

Option 3 ID : **4410093534147**

Option 4 ID : **4410093534148**

Status : **Answered**

Chosen Option : **A**

Q.4 AB is parallel to CD. A transversal PQ intersects AB and CD at E and F, respectively, and $\angle PEB = 52^\circ$. G is a point between AB and CD such that $\angle BEG = 17^\circ$ and $\angle GFE = 31^\circ$. What is the measure of $\angle EGF$?

Ans ✗ A. 30°

✗ B. 27°

✗ C. 44°

✓ D. 38°

Question Type : **MCQ**

Question ID : **441009601631**

Option 1 ID : **4410092361644**

Option 2 ID : **4410092361642**

Option 3 ID : **4410092361643**

Option 4 ID : **4410092361641**

Status : **Answered**

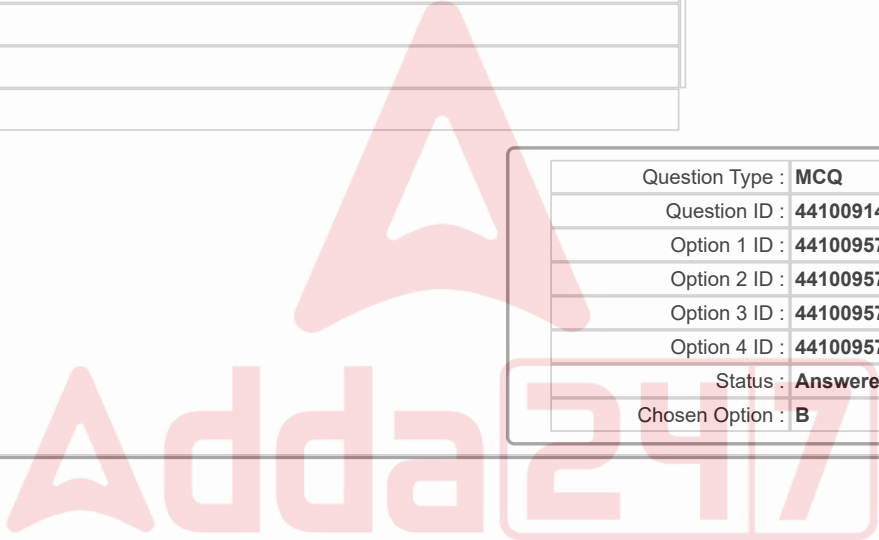
Chosen Option : **D**

Q.5	Mukesh travels for 12 hours at the rate of 2 km/hr and for 8 hours at the rate of 3 km/hr. The average speed of the journey is:
Ans	<input checked="" type="checkbox"/> A. 2.4 km/hr <input type="checkbox"/> B. 2.5 km/hr <input type="checkbox"/> C. 2 km/hr <input type="checkbox"/> D. 2.6 km/hr

Question Type :	MCQ
Question ID :	441009297456
Option 1 ID :	4410091156900
Option 2 ID :	4410091156901
Option 3 ID :	4410091156899
Option 4 ID :	4410091156902
Status :	Answered
Chosen Option :	A

Q.6	A food delivery agent travels from his restaurant to Warehouse A, a distance of 90 kilometers, at a speed of 45 km/hour. From there, he travels to Warehouse B, 120 kilometers away, at 60 km/hour. Finally, he returns to the restaurant from Warehouse B, covering 75 kilometers at a speed of 50 km/hour. What was his average speed for the entire trip? (Give your answer in km/hr, rounded off to two decimal places.)
Ans	<input type="checkbox"/> A. 51.67 km/hr <input checked="" type="checkbox"/> B. 51.82 km/hr <input type="checkbox"/> C. 50 km/hr <input type="checkbox"/> D. 52.54 km/hr

Question Type :	MCQ
Question ID :	4410091453105
Option 1 ID :	4410095740720
Option 2 ID :	4410095740722
Option 3 ID :	4410095740723
Option 4 ID :	4410095740721
Status :	Answered
Chosen Option :	B



Q.7 A store offers two successive discounts of 12% and 10% on a jacket. Find the single equivalent discount.

- Ans**
- A. 20.8%
 - B. 17.5%
 - C. 19.2%
 - D. 16.4%

Question Type :	MCQ
Question ID :	4410091410047
Option 1 ID :	4410095569146
Option 2 ID :	4410095569144
Option 3 ID :	4410095569145
Option 4 ID :	4410095569143
Status :	Answered
Chosen Option :	A

Q.8 Find the ratio between the sum of all prime numbers between 6 to 25 to the sum of all prime numbers between 35 to 50.

- Ans**
- A. 1 : 3
 - B. 11 : 15
 - C. 15 : 28
 - D. 28 : 31

Question Type :	MCQ
Question ID :	441009207415
Option 1 ID :	441009815652
Option 2 ID :	441009815653
Option 3 ID :	441009815654
Option 4 ID :	441009815655
Status :	Answered
Chosen Option :	C

Q.9 Meera spends 72% of her monthly income and saves ₹7,560. If her income increases by 15% and expenditure increases by 8%, what will be her new savings (rounded off to the nearest integer)?

- Ans**
- A. ₹10,055
 - B. ₹10,075
 - C. ₹10,095
 - D. ₹10,035

Question Type :	MCQ
Question ID :	4410091629890
Option 1 ID :	4410096437645
Option 2 ID :	4410096437646
Option 3 ID :	4410096437647
Option 4 ID :	4410096437648
Status :	Answered
Chosen Option :	A

Q.10 The fourth proportional of positive integers **a**, **b** and **c** is eight times **a**. If the value of **b** is double the value of **c**, then what is the minimum value of **a + b + c**?

Ans A. 7

B. 11

C. 13

D. 9

Question Type : **MCQ**

Question ID : **4410091458904**

Option 1 ID : **4410095763764**

Option 2 ID : **4410095763766**

Option 3 ID : **4410095763767**

Option 4 ID : **4410095763765**

Status : **Not Answered**

Chosen Option : --

Q.11 If $39a + 39b = 5967$, what is the average of **a** and **b**?

Ans A. 76.5

B. 102.5

C. 153

D. 189

Question Type : **MCQ**

Question ID : **441009151580**

Option 1 ID : **441009601502**

Option 2 ID : **441009601504**

Option 3 ID : **441009601501**

Option 4 ID : **441009601503**

Status : **Answered**

Chosen Option : **A**

Q.12 Pipe A can fill a tank in 18 hours, pipe B can fill the same tank in 21 hours, and pipe C can fill the same tank in 14 hours. The time taken by them (in hours) to fill the same tank, if they operate together, is:

Ans A. $14\frac{8}{11}$

B. $4\frac{8}{11}$

C. $5\frac{8}{11}$

D. $3\frac{8}{11}$

Question Type : **MCQ**

Question ID : **441009278022**

Option 1 ID : **4410091080049**

Option 2 ID : **4410091080048**

Option 3 ID : **4410091080047**

Option 4 ID : **4410091080050**

Status : **Answered**

Chosen Option : **C**

Q.13 P and Q started a business by investing ₹50,000 and ₹70,000, respectively. After 4 months, R joined with ₹60,000. If the total profit after a year is ₹1,80,000, how much share will R receive?

4331

Ans A. ₹47,500

B. ₹40,000

C. ₹45,000

D. ₹46,500

Question Type : **MCQ**

Question ID : **441009897644**

Option 1 ID : **4410093544649**

Option 2 ID : **4410093544646**

Option 3 ID : **4410093544647**

Option 4 ID : **4410093544648**

Status : **Answered**

Chosen Option : **C**

Q.14

$$\left(\frac{\sqrt[3]{1331}}{\sqrt[4]{4096}}\right) \times \frac{4}{33} \times 180$$

ର ସରଳୀକୃତ ମୂଲ୍ୟ ନିର୍ଣ୍ଣୟ କର ।

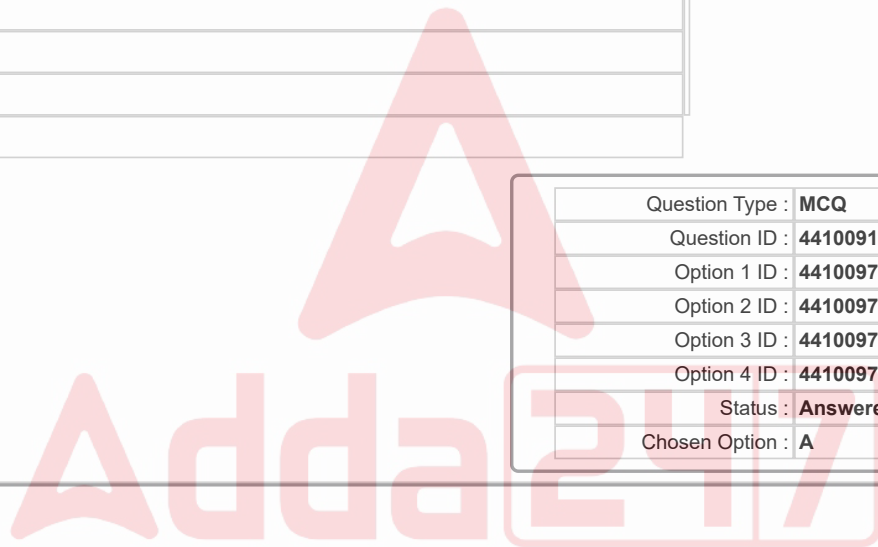
- Ans
- A. 31
 - B. 34
 - C. 37
 - D. 30

Question Type :	MCQ
Question ID :	441009910574
Option 1 ID :	4410093596549
Option 2 ID :	4410093596548
Option 3 ID :	4410093596550
Option 4 ID :	4410093596547
Status :	Answered
Chosen Option :	D

Q.15 Find the fourth proportional to 24, 64, and 72.

- Ans
- A. 192
 - B. 144
 - C. 120
 - D. 96

Question Type :	MCQ
Question ID :	4410091836764
Option 1 ID :	4410097240697
Option 2 ID :	4410097240696
Option 3 ID :	4410097240695
Option 4 ID :	4410097240694
Status :	Answered
Chosen Option :	A



Q.16 What sum (in ₹) will earn an interest of ₹480 in 3 years at 16% simple interest per year?

- Ans**
- A. 1,150
 - B. 1,200
 - C. 800
 - D. 1,000

Question Type :	MCQ
Question ID :	441009853110
Option 1 ID :	4410093365415
Option 2 ID :	4410093365414
Option 3 ID :	4410093365413
Option 4 ID :	4410093365412
Status :	Answered
Chosen Option :	D

Q.17 A conical tent is to be made for a camping trip. If the base dia is 20% more than the diameter, how much canvas cloth is required (two decimal places)?

(Take $\pi = \frac{22}{7}$)

- Ans**
- A. 204.29 m²
 - B. 209.05 m²
 - C. 208.72 m²
 - D. 201.13 m²

Question Type :	MCQ
Question ID :	441009274483
Option 1 ID :	4410091066227
Option 2 ID :	4410091066229
Option 3 ID :	4410091066228
Option 4 ID :	4410091066226
Status :	Answered
Chosen Option :	A

Q.18 The product of two consecutive positive integers is 1560. If the smaller of these integers is represented by x , which of the following options represents the equation used to find the value of x ?

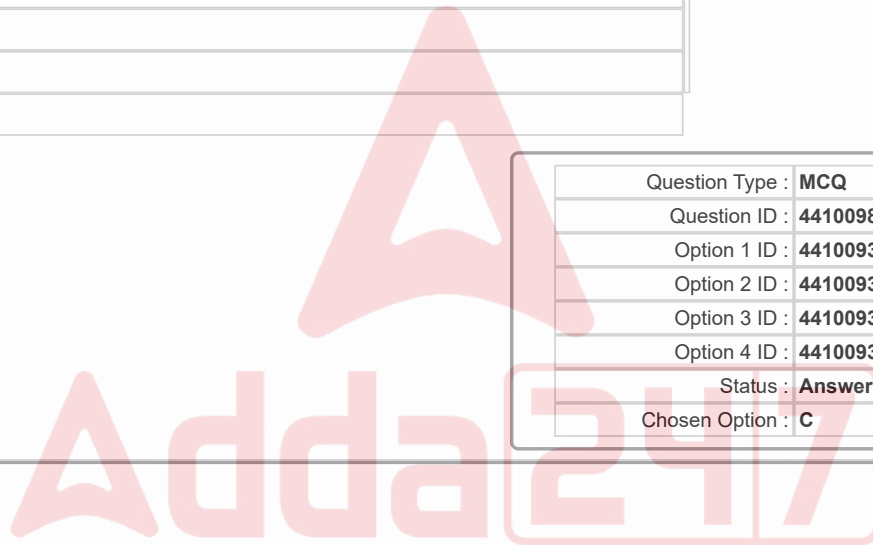
- Ans**
- A. $x^2 - x - 1560 = 0$
 - B. $x^2 - x + 1560 = 0$
 - C. $x^2 + x - 1560 = 0$
 - D. $x^2 + x + 1560 = 0$

Question Type :	MCQ
Question ID :	4410091220356
Option 1 ID :	4410094814849
Option 2 ID :	4410094814850
Option 3 ID :	4410094814847
Option 4 ID :	4410094814848
Status :	Answered
Chosen Option :	C

Q.19 Nitin has ₹1,218. He divides this amount between his sons, Pravin and Rishi, and asks them to invest their respective shares at a compound interest rate of 10% per annum, compounded annually. It is found that Pravin and Rishi receive equal amounts after 16 years and 17 years, respectively. How much (in ₹) did Nitin give to Rishi?

- Ans**
- A. 580
 - B. 738
 - C. 638
 - D. 430

Question Type :	MCQ
Question ID :	441009897835
Option 1 ID :	4410093545410
Option 2 ID :	4410093545413
Option 3 ID :	4410093545411
Option 4 ID :	4410093545412
Status :	Answered
Chosen Option :	C



Q.20 Pipes A and B can fill a tank in 10 and 12 hours respectively. Pipe C can empty it in 6 hours. If all the three pipes are opened together, then find the time required to fill the tank.7005

Ans A. 60 hours

B. 55 hours

C. 40 hours

D. 50 hours

Question Type : **MCQ**

Question ID : **441009900318**

Option 1 ID : **4410093555344**

Option 2 ID : **4410093555345**

Option 3 ID : **4410093555343**

Option 4 ID : **4410093555342**

Status : **Answered**

Chosen Option : **A**

Section : **General Studies**

Q.21 Which major change does the Viksit Bharat—Guarantee for Rozgar and Ajeevika Mission (Gramin) Act, 2025 introduce in the statutory wage employment guarantee for rural households?

Ans A. Increasing the guarantee to 125 days of wage employment per financial year

B. Limiting employment to only peak agricultural seasons

C. Providing employment exclusively to women members

D. Maintaining the previous 100 days entitlement

Question Type : **MCQ**

Question ID : **4410091835208**

Option 1 ID : **4410097234636**

Option 2 ID : **4410097234638**

Option 3 ID : **4410097234639**

Option 4 ID : **4410097234637**

Status : **Answered**

Chosen Option : **A**

Q.22 The naval exercise Varuna 2025 was carried out between India and which country?

- Ans A. France
 B. USA
 C. Japan
 D. Australia

Question Type :	MCQ
Question ID :	4410091309208
Option 1 ID :	4410095168466
Option 2 ID :	4410095168467
Option 3 ID :	4410095168469
Option 4 ID :	4410095168468
Status :	Answered
Chosen Option :	A

Q.23 Which is the most populous country in the world as per the United Nations in 2024?

- Ans A. China
 B. India
 C. United States of America
 D. Brazil

Question Type :	MCQ
Question ID :	441009510820
Option 1 ID :	4410091998438
Option 2 ID :	4410091998439
Option 3 ID :	4410091998440
Option 4 ID :	4410091998441
Status :	Answered
Chosen Option :	B

Q.24 In India, which ministry is primarily responsible for safeguarding the environment?

- Ans A. Ministry of Agriculture
 B. Ministry of Earth Sciences
 C. Ministry of Environment, Forest and Climate Change
 D. Ministry of Rural Development

Question Type :	MCQ
Question ID :	4410091445306
Option 1 ID :	4410095709800
Option 2 ID :	4410095709797
Option 3 ID :	4410095709798
Option 4 ID :	4410095709799
Status :	Answered
Chosen Option :	C

Q.25 The molecular mass of water (H₂O) is:

Ans A. 18 u

B. 10 u

C. 20 u

D. 16 u

Question Type : **MCQ**

Question ID : **4410091431844**

Option 1 ID : **4410095655669**

Option 2 ID : **4410095655671**

Option 3 ID : **4410095655670**

Option 4 ID : **4410095655668**

Status : **Answered**

Chosen Option : **A**

Q.26 Which Article of the Indian Constitution provides for the establishment of the Commission and Committee of Parliament on official language?

Ans A. Article 344

B. Article 333

C. Article 334

D. Article 343

Question Type : **MCQ**

Question ID : **441009325280**

Option 1 ID : **4410091267437**

Option 2 ID : **4410091267439**

Option 3 ID : **4410091267438**

Option 4 ID : **4410091267436**

Status : **Answered**

Chosen Option : **D**

Q.27 Which Pacific Island city hosted the 6th Forum of Ministers and Environment Authorities of Asia Pacific in August 2025?

Ans A. Suva

B. Nadi

C. Apia

D. Dhaka

Question Type : **MCQ**

Question ID : **4410091469573**

Option 1 ID : **4410095806254**

Option 2 ID : **4410095806256**

Option 3 ID : **4410095806255**

Option 4 ID : **4410095806257**

Status : **Marked For Review**

Chosen Option : **A**

Q.28 Which state received the Best State for Agriculture award at the 16th Agriculture Leadership Conclave in July 2025?

- Ans**
- A. Haryana
 - B. Maharashtra
 - C. Odisha
 - D. Bihar

Question Type :	MCQ
Question ID :	4410091525993
Option 1 ID :	4410096027115
Option 2 ID :	4410096027114
Option 3 ID :	4410096027117
Option 4 ID :	4410096027116
Status :	Answered
Chosen Option :	B

Q.29 In October 2025, officials of the Government of Odisha signed a Memorandum of Understanding (MoU) worth approximately ₹12,200 crore for the development of which specific category of infrastructure?

- Ans**
- A. Rural electrification distribution grid
 - B. Multi-city metro rail connectivity lines
 - C. Inland water transportation corridors
 - D. Interstate express highway system

Question Type :	MCQ
Question ID :	4410091526148
Option 1 ID :	4410096027724
Option 2 ID :	4410096027725
Option 3 ID :	4410096027722
Option 4 ID :	4410096027723
Status :	Not Answered
Chosen Option :	--

Q.30 Which feature differentiates moist and dry tropical deciduous forests in India?

- Ans**
- A. Altitude variation
 - B. Wind direction
 - C. Type of soil
 - D. Amount of rainfall requirement

Question Type :	MCQ
Question ID :	4410091312241
Option 1 ID :	4410095180640
Option 2 ID :	4410095180643
Option 3 ID :	4410095180642
Option 4 ID :	4410095180641
Status :	Answered
Chosen Option :	D

Q.31 Which of the following is considered part of the 'smriti' tradition?

- Ans**
- A. The Upanishads
 - B. The Sama Veda
 - C. The Rig Veda
 - D. The Bhagavad Gita

Question Type :	MCQ
Question ID :	44100981247
Option 1 ID :	441009322571
Option 2 ID :	441009322573
Option 3 ID :	441009322570
Option 4 ID :	441009322572
Status :	Answered
Chosen Option :	C

Q.32 Odisha was formed as a separate province in which of the following years?

- Ans**
- A. 1950
 - B. 1947
 - C. 1956
 - D. 1936

Question Type :	MCQ
Question ID :	4410091847740
Option 1 ID :	4410097283278
Option 2 ID :	4410097283277
Option 3 ID :	4410097283279
Option 4 ID :	4410097283276
Status :	Answered
Chosen Option :	D

Q.33 In the case of a concave mirror, the real and inverted image is always formed on which position?

- Ans**
- A. Behind the mirror
 - B. On the same side as the object
 - C. On the mirror surface
 - D. On the opposite side of the object

Question Type :	MCQ
Question ID :	4410091429945
Option 1 ID :	4410095648114
Option 2 ID :	4410095648112
Option 3 ID :	4410095648115
Option 4 ID :	4410095648113
Status :	Not Answered
Chosen Option :	--

Q.34 Approximately what fraction of the total area of Odisha is covered by mountainous regions?

- Ans**
- A. Two-third
 - B. One-fourth
 - C. Half
 - D. Three-fourth

Question Type :	MCQ
Question ID :	4410091424462
Option 1 ID :	4410095626699
Option 2 ID :	4410095626702
Option 3 ID :	4410095626700
Option 4 ID :	4410095626701
Status :	Answered
Chosen Option :	A

Q.35 The Utkal Sammilani (Utkal Union Conference) — a key force in the Odia unification movement — held its first major conference in:

- Ans**
- A. 1896
 - B. 1912
 - C. 1936
 - D. 1903

Question Type :	MCQ
Question ID :	4410091334438
Option 1 ID :	4410095269419
Option 2 ID :	4410095269421
Option 3 ID :	4410095269422
Option 4 ID :	4410095269420
Status :	Answered
Chosen Option :	D

Q.36 What does OCI stand for in the context of Indian citizenship?

- Ans**
- A. Overseas Cooperative Individuals
 - B. Official Citizens of India
 - C. Original Citizens of India
 - D. Overseas Citizenship of India

Question Type :	MCQ
Question ID :	441009828609
Option 1 ID :	4410093267969
Option 2 ID :	4410093267970
Option 3 ID :	4410093267968
Option 4 ID :	4410093267967
Status :	Marked For Review
Chosen Option :	D

Q.37 Which of the following is recognised as a point inside the Earth from where an earthquake originates?

- Ans**
- A. Seismic gap
 - B. Fault line
 - C. Epicentre
 - D. Hypocentre

Question Type :	MCQ
Question ID :	4410091460298
Option 1 ID :	4410095769368
Option 2 ID :	4410095769367
Option 3 ID :	4410095769365
Option 4 ID :	4410095769366
Status :	Answered
Chosen Option :	C

Q.38 The soil in the Bhangar region contains calcareous deposits locally known by which of the following names?

- Ans**
- A. Regur
 - B. Kankar
 - C. Alluvium
 - D. Khadar

Question Type :	MCQ
Question ID :	4410091287145
Option 1 ID :	4410095080365
Option 2 ID :	4410095080364
Option 3 ID :	4410095080362
Option 4 ID :	4410095080363
Status :	Answered
Chosen Option :	C

Q.39 Which Act changed the designation of the Governor-General of India to the Viceroy of India?

- Ans**
- A. Pitt's India Act of 1784
 - B. Charter Act of 1793
 - C. Government of India Act of 1858
 - D. Government of India Act of 1919

Question Type :	MCQ
Question ID :	441009103896
Option 1 ID :	441009413783
Option 2 ID :	441009413781
Option 3 ID :	441009413782
Option 4 ID :	441009413784
Status :	Not Attempted and Marked For Review
Chosen Option :	--

Q.40 Shehnai, the instrument played by Ustad Bismillah Khan, belongs to which category of musical instruments?

- Ans
- A. Percussion instrument
 - B. Electronic instrument
 - C. String instrument
 - D. Wind instrument

Question Type :	MCQ
Question ID :	441009608383
Option 1 ID :	4410092388651
Option 2 ID :	4410092388652
Option 3 ID :	4410092388649
Option 4 ID :	4410092388650
Status :	Answered
Chosen Option :	C

Q.41 Which is the main nitrogenous waste excreted by human kidneys?

- Ans
- A. Uric acid
 - B. Ammonia
 - C. Urea
 - D. Glucose

Question Type :	MCQ
Question ID :	4410091454408
Option 1 ID :	4410095745939
Option 2 ID :	4410095745937
Option 3 ID :	4410095745938
Option 4 ID :	4410095745940
Status :	Answered
Chosen Option :	B

Q.42 At which session of the Indian National Congress did Sarojini Naidu serve as president?

- Ans
- A. 1931, Karachi
 - B. 1924, Belgaum
 - C. 1920, Nagpur
 - D. 1925, Kanpur

Question Type :	MCQ
Question ID :	4410091068717
Option 1 ID :	4410094220371
Option 2 ID :	4410094220369
Option 3 ID :	4410094220368
Option 4 ID :	4410094220370
Status :	Answered
Chosen Option :	D

Q.43 In early 2026, the Supreme Court directed the Union Government to constitute a tribunal under the Inter-State River Water Disputes Act, 1956, to adjudicate the Pennaiyar River dispute between which two states?

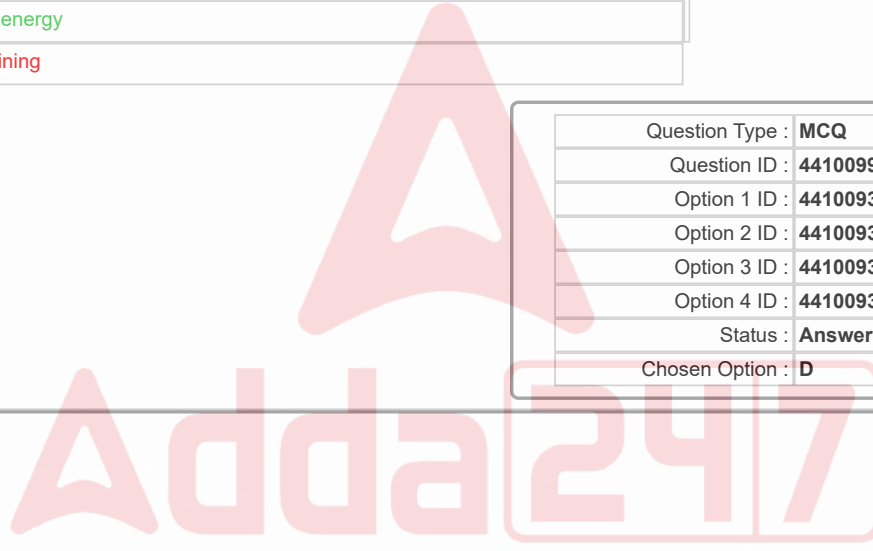
- Ans**
- A. Odisha and Chhattisgarh
 - B. Maharashtra and Telengana
 - C. Punjab and Haryana
 - D. Tamil Nadu and Karnataka

Question Type :	MCQ
Question ID :	4410091835761
Option 1 ID :	4410097236779
Option 2 ID :	4410097236781
Option 3 ID :	4410097236780
Option 4 ID :	4410097236778
Status :	Answered
Chosen Option :	D

Q.44 During the Utkarsh Odisha – Make in Odisha Conclave 2025, which sector attracted investment proposals worth ₹4.33 lakh crore, as announced in January 2025?

- Ans**
- A. IT and electronics
 - B. Agro-processing
 - C. Renewable energy
 - D. Steel and mining

Question Type :	MCQ
Question ID :	441009904129
Option 1 ID :	4410093570367
Option 2 ID :	4410093570368
Option 3 ID :	4410093570366
Option 4 ID :	4410093570369
Status :	Answered
Chosen Option :	D



Q.45 To uphold and protect the sovereignty, unity, and integrity of India" is enshrined as one of the Fundamental Duties under which article of the Indian Constitution?

- Ans**
- A. Article 60A
 - B. Article 57A
 - C. Article 51A
 - D. Article 54A

Question Type :	MCQ
Question ID :	441009870530
Option 1 ID :	4410093435075
Option 2 ID :	4410093435074
Option 3 ID :	4410093435072
Option 4 ID :	4410093435073
Status :	Answered
Chosen Option :	C

Section : English

Q.46 Choose the most appropriate synonym of the underlined word to complete the sentence.

The manager's obduracy during negotiations frustrated the other party, who were unprepared for such _____.

- Ans**
- A. intractability
 - B. deference
 - C. acrimony
 - D. candor

Question Type :	MCQ
Question ID :	4410091830374
Option 1 ID :	4410097215479
Option 2 ID :	4410097215481
Option 3 ID :	4410097215480
Option 4 ID :	4410097215482
Status :	Not Answered
Chosen Option :	--

Q.47 Select the most appropriate option to substitute the underlined word segment in the given sentence.

He was declared as (a/an) person who is unable to pay debts.

Ans A. investor

B. affluent

C. insolvent

D. creditor

Question Type : **MCQ**

Question ID : **4410091817353**

Option 1 ID : **4410097164833**

Option 2 ID : **4410097164831**

Option 3 ID : **4410097164830**

Option 4 ID : **4410097164832**

Status : **Answered**

Chosen Option : **C**

Q.48 Select the sentence that makes the correct use of past perfect tense from the given options.

Ans A. By the time the guests arrived, the chef had prepared the dinner.

B. By the time the guests arrived, the chef prepared the dinner.

C. By the time the guests arrived, the chef had been preparing the dinner.

D. By the time the guests arrived, the chef was preparing the dinner.

Question Type : **MCQ**

Question ID : **4410091824386**

Option 1 ID : **4410097192133**

Option 2 ID : **4410097192132**

Option 3 ID : **4410097192134**

Option 4 ID : **4410097192131**

Status : **Answered**

Chosen Option : **A**

Q.49 A statement divided into different segments is given. Rearrange all the segments to form a coherent statement.

- A. heights of character
- B. I agree with the
- C. of oppression create
- D. statement that depths

Ans A. ABDC

B. DBAC

C. BDCA

D. CBDA

Question Type : **MCQ**

Question ID : **441009433873**

Option 1 ID : **4410091695012**

Option 2 ID : **4410091695013**

Option 3 ID : **4410091695010**

Option 4 ID : **4410091695011**

Status : **Answered**

Chosen Option : **C**

Q.50 Which of the following sentences is in active voice?

Ans A. The report has been prepared by the team.

B. The team prepared the report yesterday.

C. The report was prepared by the team yesterday.

D. The report is being prepared by the team.

Question Type : **MCQ**

Question ID : **4410091828523**

Option 1 ID : **4410097208261**

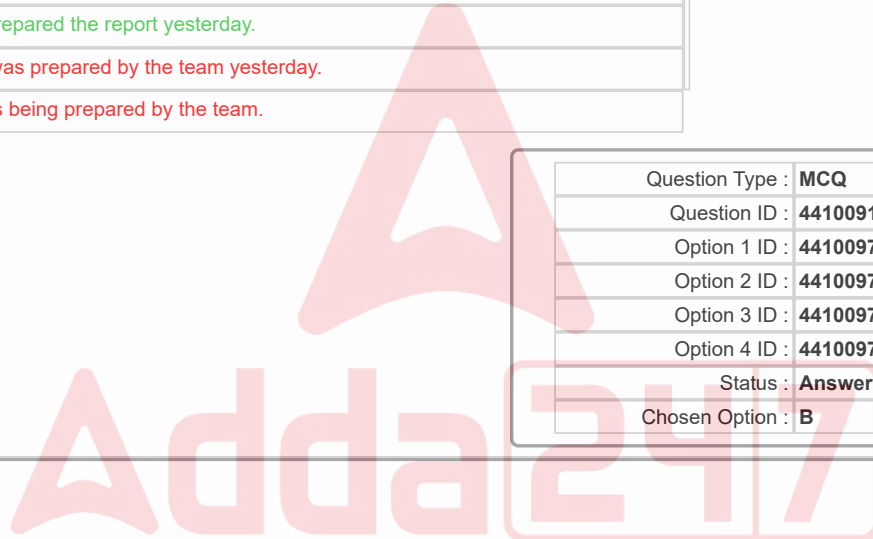
Option 2 ID : **4410097208259**

Option 3 ID : **4410097208258**

Option 4 ID : **4410097208260**

Status : **Answered**

Chosen Option : **B**



Q.51 Choose the most appropriate synonym of the underlined word to complete the sentence.

The scientist's alacrity in addressing questions impressed the panel, reflecting her _____.

- Ans**
- A. skepticism
 - B. vivacity
 - C. eagerness
 - D. diffidence

Question Type :	MCQ
Question ID :	4410091830379
Option 1 ID :	4410097215502
Option 2 ID :	4410097215501
Option 3 ID :	4410097215499
Option 4 ID :	4410097215500
Status :	Answered
Chosen Option :	B

Q.52 Replace the underlined words in the sentence with the most suitable option.

I felt very anxious about my salary increment and kept checking my emails. My friends suggested that when you wait impatiently for something to happen, it feels like it takes much longer, so I should shift my focus.

- Ans**
- A. actions speak louder than words
 - B. a watched pot never boils
 - C. a rolling stone gathers no moss
 - D. a penny saved is a penny earned

Question Type :	MCQ
Question ID :	4410091836796
Option 1 ID :	4410097240818
Option 2 ID :	4410097240819
Option 3 ID :	4410097240820
Option 4 ID :	4410097240821
Status :	Answered
Chosen Option :	B

Q.53 Choose the option that correctly replaces the incorrect part of the sentence.

The scientist carefully documented her observations, rarely made mistakes, comprehensively analyzed the data, and funnily concluded the report.

Ans A. The scientist carefully documented her observations, rarely made mistakes, comprehensively analyzed the data, and ultimately concluded the report.

B. The scientist carefully documented her observations, rarely made mistakes, hastily analyzed the data, and funnily concluded the report.

C. The scientist noisily documented her observations, rarely made mistakes, comprehensively analyzed the data, and funnily concluded the report.

D. The scientist carefully documented her observations, supposedly made mistakes, comprehensively analyzed the data, and funnily concluded the report.

Question Type : **MCQ**

Question ID : **4410091828337**

Option 1 ID : **4410097207521**

Option 2 ID : **4410097207520**

Option 3 ID : **4410097207518**

Option 4 ID : **4410097207519**

Status : **Answered**

Chosen Option : **D**

Q.54 Out of the four alternatives, choose the one that can be used as a substitute for the bracketed word segment.

A/An (person who lives outside their native country, often for work or personal reasons) may face challenges adjusting to a new culture.

Ans A. expatriate

B. native

C. emigrant

D. visitor

Question Type : **MCQ**

Question ID : **4410091831556**

Option 1 ID : **4410097220150**

Option 2 ID : **4410097220147**

Option 3 ID : **4410097220149**

Option 4 ID : **4410097220148**

Status : **Answered**

Chosen Option : **C**

Q.55 Identify the segment of the sentence that contains a grammatical error.

(P) The manager / (Q) have approved the new guidelines / (R) and informed the team / (S) immediately.

Ans A. Q

B. S

C. R

D. P

Question Type : **MCQ**

Question ID : **4410091828567**

Option 1 ID : **4410097208435**

Option 2 ID : **4410097208437**

Option 3 ID : **4410097208436**

Option 4 ID : **4410097208434**

Status : **Answered**

Chosen Option : **A**

Q.56 Select the sentence that correctly uses the present tense to describe a routine activity.

Ans A. Every evening, she completed her homework before dinner.

B. Every evening, she is completing her homework before dinner.

C. Every evening, she completes her homework before dinner.

D. Every evening, she has completed her homework before dinner.

Question Type : **MCQ**

Question ID : **4410091787958**

Option 1 ID : **4410097050424**

Option 2 ID : **4410097050422**

Option 3 ID : **4410097050425**

Option 4 ID : **4410097050423**

Status : **Answered**

Chosen Option : **C**

Q.57 Choose the closest meaning of the given idiom.

Icing on the cake

- Ans
- A. Something extra that makes a good situation even better
 - B. The last part of a celebration
 - C. A small but important detail
 - D. A sweet reward after hardship

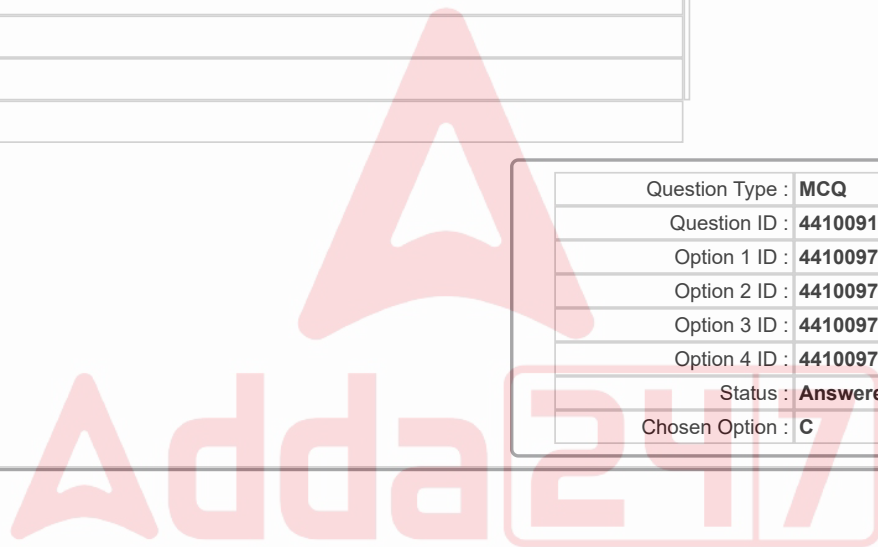
Question Type :	MCQ
Question ID :	4410091167308
Option 1 ID :	4410094603837
Option 2 ID :	4410094603839
Option 3 ID :	4410094603840
Option 4 ID :	4410094603838
Status :	Answered
Chosen Option :	A

Q.58 Select the word which means the same as the underlined group of words.

The examiner instructed all students to write their answers in handwriting that can be read clearly and without difficulty, as untidy writing would result in loss of marks.

- Ans
- A. Fluent
 - B. Italic
 - C. Legible
 - D. Cursive

Question Type :	MCQ
Question ID :	4410091848885
Option 1 ID :	4410097287773
Option 2 ID :	4410097287774
Option 3 ID :	4410097287771
Option 4 ID :	4410097287772
Status :	Answered
Chosen Option :	C



Q.59 Rectify the sentence by recognising the error in it.
She suggested that he reads the instructions carefully before starting.

- Ans**
- A. She suggested that he has read the instructions carefully before starting.
 - B. She suggested that he is reading the instructions carefully before starting.
 - C. She suggested that he will read the instructions carefully before starting.
 - D. She suggested that he read the instructions carefully before starting.

Question Type :	MCQ
Question ID :	4410091819130
Option 1 ID :	4410097171801
Option 2 ID :	4410097171798
Option 3 ID :	4410097171800
Option 4 ID :	4410097171799
Status :	Not Answered
Chosen Option :	--

Q.60 Choose the incorrect sentence in direct speech.

- Ans**
- A. She said, "That she would complete the work soon."
 - B. She said, "Why are you late?"
 - C. She said, "Please help me with this problem."
 - D. She said, "I will call you tomorrow."

Question Type :	MCQ
Question ID :	4410091825629
Option 1 ID :	4410097196804
Option 2 ID :	4410097196802
Option 3 ID :	4410097196803
Option 4 ID :	4410097196805
Status :	Answered
Chosen Option :	A

Comprehension:

Read the given passage and answer the questions that follow.

Diaspora refers to a large group of people who may share a national or regional origin, but for a variety of reasons, are living outside of this traditional homeland. Diasporic populations are often outnumbered in their new nation of residence. Diaspora was initially used to describe the migrations of Jewish people after the fall of Jerusalem in the sixth century B.C.E. It has since been used to describe other instances of mass migration or forced relocation. Diasporic populations often have strong social and cultural ties to their homeland, but may also have multiple cultural identities.

Throughout global history, there have been hundreds of migration movements, which created and continue to create diasporic populations. Many diasporas have been traumatic. The Jewish diaspora consisted of centuries of Jewish migration, often because of historical expulsion and discrimination. The African diaspora refers to the large populations of African people brought against their will to the Americas through the institution of slavery.

SubQuestion No : 61

Q.61 Select the fact presented in the passage.

- Ans**
- A. Diasporic populations rarely maintain ties with their homeland.
 - B. The African diaspora refers to cultural exchange between continents.
 - C. All diasporas are voluntary and joyous.
 - D. The term 'diaspora' originated after the fall of Jerusalem in the sixth century B.C.E.

Question Type :	MCQ
Question ID :	4410091448500
Option 1 ID :	4410095722486
Option 2 ID :	4410095722485
Option 3 ID :	4410095722487
Option 4 ID :	4410095722484
Status :	Answered
Chosen Option :	D

Comprehension:

Read the given passage and answer the questions that follow.

Diaspora refers to a large group of people who may share a national or regional origin, but for a variety of reasons, are living outside of this traditional homeland. Diasporic populations are often outnumbered in their new nation of residence. Diaspora was initially used to describe the migrations of Jewish people after the fall of Jerusalem in the sixth century B.C.E. It has since been used to describe other instances of mass migration or forced relocation. Diasporic populations often have strong social and cultural ties to their homeland, but may also have multiple cultural identities.

Throughout global history, there have been hundreds of migration movements, which created and continue to create diasporic populations. Many diasporas have been traumatic. The Jewish diaspora consisted of centuries of Jewish migration, often because of historical expulsion and discrimination. The African diaspora refers to the large populations of African people brought against their will to the Americas through the institution of slavery.

SubQuestion No : 62

Q.62 Select the appropriate antonym of the phrase 'against their will'.

Ans A. Voluntarily

B. Secretly

C. Reluctantly

D. Forcefully

Question Type :	MCQ
Question ID :	4410091448501
Option 1 ID :	4410095722488
Option 2 ID :	4410095722491
Option 3 ID :	4410095722490
Option 4 ID :	4410095722489
Status :	Answered
Chosen Option :	A

Comprehension:

Read the given passage and answer the questions that follow.

Diaspora refers to a large group of people who may share a national or regional origin, but for a variety of reasons, are living outside of this traditional homeland. Diasporic populations are often outnumbered in their new nation of residence. Diaspora was initially used to describe the migrations of Jewish people after the fall of Jerusalem in the sixth century B.C.E. It has since been used to describe other instances of mass migration or forced relocation. Diasporic populations often have strong social and cultural ties to their homeland, but may also have multiple cultural identities.

Throughout global history, there have been hundreds of migration movements, which created and continue to create diasporic populations. Many diasporas have been traumatic. The Jewish diaspora consisted of centuries of Jewish migration, often because of historical expulsion and discrimination. The African diaspora refers to the large populations of African people brought against their will to the Americas through the institution of slavery.

SubQuestion No : 63

Q.63 Select an appropriate title for the passage.

Ans A. Cultural Identities in Modern Nations

B. Jewish Diaspora

C. The Tragedy of Global Migration

D. Understanding Diaspora

Question Type :	MCQ
Question ID :	4410091448502
Option 1 ID :	4410095722495
Option 2 ID :	4410095722492
Option 3 ID :	4410095722494
Option 4 ID :	4410095722493
Status :	Answered
Chosen Option :	D

Comprehension:

Read the given passage and answer the questions that follow.

Diaspora refers to a large group of people who may share a national or regional origin, but for a variety of reasons, are living outside of this traditional homeland. Diasporic populations are often outnumbered in their new nation of residence. Diaspora was initially used to describe the migrations of Jewish people after the fall of Jerusalem in the sixth century B.C.E. It has since been used to describe other instances of mass migration or forced relocation. Diasporic populations often have strong social and cultural ties to their homeland, but may also have multiple cultural identities.

Throughout global history, there have been hundreds of migration movements, which created and continue to create diasporic populations. Many diasporas have been traumatic. The Jewish diaspora consisted of centuries of Jewish migration, often because of historical expulsion and discrimination. The African diaspora refers to the large populations of African people brought against their will to the Americas through the institution of slavery.

SubQuestion No : 64

Q.64 Select an option that conveys the correct tone of the passage.

Ans A. Emotional

B. Critical

C. Humorous

D. Analytical

Question Type : **MCQ**

Question ID : **4410091448503**

Option 1 ID : **4410095722497**

Option 2 ID : **4410095722498**

Option 3 ID : **4410095722499**

Option 4 ID : **4410095722496**

Status : **Answered**

Chosen Option : **B**

Comprehension:

Read the given passage and answer the questions that follow.

Diaspora refers to a large group of people who may share a national or regional origin, but for a variety of reasons, are living outside of this traditional homeland. Diasporic populations are often outnumbered in their new nation of residence. Diaspora was initially used to describe the migrations of Jewish people after the fall of Jerusalem in the sixth century B.C.E. It has since been used to describe other instances of mass migration or forced relocation. Diasporic populations often have strong social and cultural ties to their homeland, but may also have multiple cultural identities.

Throughout global history, there have been hundreds of migration movements, which created and continue to create diasporic populations. Many diasporas have been traumatic. The Jewish diaspora consisted of centuries of Jewish migration, often because of historical expulsion and discrimination. The African diaspora refers to the large populations of African people brought against their will to the Americas through the institution of slavery.

SubQuestion No : 65

Q.65 Select an appropriate theme of the passage.

- Ans**
- A. The decline of traditional homelands due to globalization
- B. The historical and cultural significance of diasporic communities
- C. The challenges faced by people living in modern cities
- D. The economic advantages of migration and trade

Question Type : **MCQ**

Question ID : **4410091448504**

Option 1 ID : **4410095722501**

Option 2 ID : **4410095722502**

Option 3 ID : **4410095722500**

Option 4 ID : **4410095722503**

Status : **Answered**

Chosen Option : **B**

Section : **Odia**

Q.66 ଏହା ମଧ୍ୟରୁ କେଉଁଟି ଉତ୍ସମ ଶବ୍ଦ ଅଟେ?

- Ans**
- A. ବହି
- B. ବାପା
- C. ଅଙ୍କ
- D. ଜଳ

Question Type : **MCQ**

Question ID : **4410091235958**

Option 1 ID : **4410094877425**

Option 2 ID : **4410094877423**

Option 3 ID : **4410094877424**

Option 4 ID : **4410094877422**

Status : **Answered**

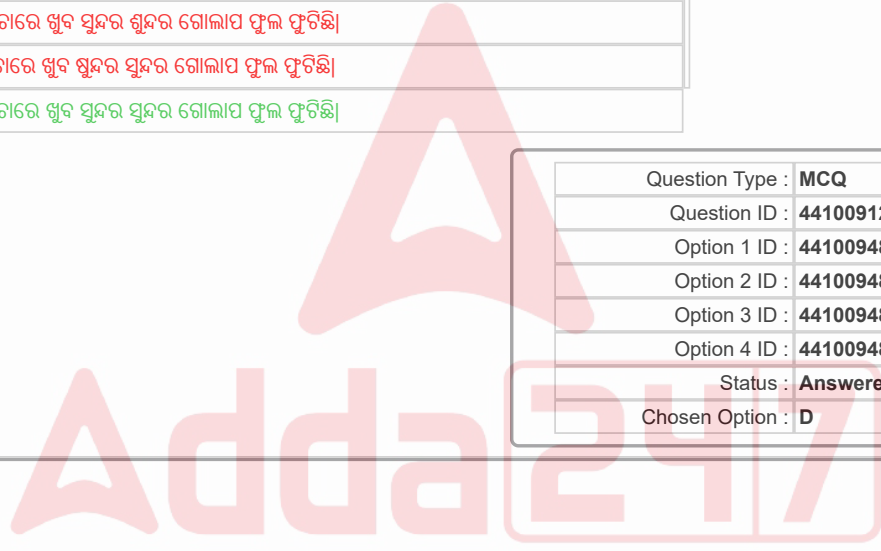
Chosen Option : **D**

Q.67	ଦିଆଯାଇଥିବା ଓଡ଼ିଆ ବାକ୍ୟର ସବୁଠାରୁ ଉପଯୁକ୍ତ ଇଂରାଜୀ ଅନୁବାଦ ବିକଳ୍ପ ବାଛନ୍ତୁ। ରାହୁଲର ଭାଇ ଗତ ମାର୍ଚ୍ଚ ମାସରୁ ବିଦେଶ ଗସ୍ତରେ ଯାଇଛି।
Ans	<input checked="" type="checkbox"/> A. Rahul's brother is going for a foreign tour from March. <input checked="" type="checkbox"/> B. Rahul's brother was on a foreign tour since last March. <input checked="" type="checkbox"/> C. Rahul's brother has been on a foreign tour. <input checked="" type="checkbox"/> D. Rahul's brother has been on a foreign tour since last March.

Question Type :	MCQ
Question ID :	4410091232844
Option 1 ID :	4410094865060
Option 2 ID :	4410094865062
Option 3 ID :	4410094865063
Option 4 ID :	4410094865061
Status :	Answered
Chosen Option :	D

Q.68	କିଛି ଶବ୍ଦ ଭୁଲ ଲେଖା ହୋଇଥିବା ଏକ ବାକ୍ୟ ଦିଆଯାଇଛି। ବିକଳ୍ପ ଗୁଡ଼ିକରୁ ଗୋଟିଏ ବାଛନ୍ତୁ, ଯେଉଁଥିରେ କୌଣସି ବନାମ ତ୍ରୁଟି ନାହିଁ। ଆମ ଘର ବଗିଚାରେ ଖୁବ୍ ସୁନ୍ଦର ସୁନ୍ଦର ଗୋଲାପ ଫୁଲ ଫୁଟିଛି।
Ans	<input checked="" type="checkbox"/> A. ଆମ ଘର ବଗିଚାରେ ଖୁବ୍ ସୁନ୍ଦର ସୁନ୍ଦର ଗୋଲାପ ଫୁଲ ଫୁଟିଛି। <input checked="" type="checkbox"/> B. ଆମ ଘର ବଗିଚାରେ ଖୁବ୍ ସୁନ୍ଦର ଶୁନ୍ଦର ଗୋଲାପ ଫୁଲ ଫୁଟିଛି। <input checked="" type="checkbox"/> C. ଆମ ଘର ବଗିଚାରେ ଖୁବ୍ ସୁନ୍ଦର ସୁନ୍ଦର ଗୋଲାପ ଫୁଲ ଫୁଟିଛି। <input checked="" type="checkbox"/> D. ଆମ ଘର ବଗିଚାରେ ଖୁବ୍ ସୁନ୍ଦର ସୁନ୍ଦର ଗୋଲାପ ଫୁଲ ଫୁଟିଛି।

Question Type :	MCQ
Question ID :	4410091236241
Option 1 ID :	4410094878548
Option 2 ID :	4410094878545
Option 3 ID :	4410094878546
Option 4 ID :	4410094878547
Status :	Answered
Chosen Option :	D



Q.69 ଟାକୁ ନିମନ୍ତଣ କରାଯାଇଥିଲା, ସେ ଆସି ନଥିଲେ ।

Ans A. କାରଣ

B. ଚେଷ୍ଟା

C. ଉପାଦାନ

D. ଯଦି

Question Type : MCQ

Question ID : 4410091675402

Option 1 ID : 4410096610749

Option 2 ID : 4410096610750

Option 3 ID : 4410096610751

Option 4 ID : 4410096610748

Status : Answered

Chosen Option : D

Q.70 ଦିଆଯାଇଥିବା ଓଡ଼ିଆ ବାକ୍ୟର ସବୁଠାରୁ ଉପଯୁକ୍ତ ଇଂରାଜୀ ଅନୁବାଦ ବିକଳ୍ପ ବାଛନ୍ତୁ ।

ତୋ ଭଉଣୀ କାହିଁକି ଆଜି ଘରକୁ ଯାଇଥିଲା?

Ans A. Why will your sister go to your grandmother's house?

B. Why your sister was going to your grandmother's house?

C. Why did your sister go to your grandmother's house?

D. Why your sisters went to your grandmother's house?

Question Type : MCQ

Question ID : 4410091232382

Option 1 ID : 4410094863129

Option 2 ID : 4410094863131

Option 3 ID : 4410094863130

Option 4 ID : 4410094863128

Status : Answered

Chosen Option : C

Q.71 ସେ ଭଲକି ପଢ଼ି ନଥିଲେ, ସେ ପରୀକ୍ଷାରେ ପାସ୍ କରିଥିଲେ ।

Ans A. ଯେପର୍ଯ୍ୟନ୍ତ

B. ଯଦି

C. କାରଣ

D. ଚେଷ୍ଟା

Question Type : MCQ

Question ID : 4410091675466

Option 1 ID : 4410096610982

Option 2 ID : 4410096610980

Option 3 ID : 4410096610981

Option 4 ID : 4410096610983

Status : Answered

Chosen Option : B

Q.72 ନିମ୍ନରେ ଦିଆଯାଇଥିବା ବିକଳ୍ପ ମଧ୍ୟରୁ ଉପଯୁକ୍ତ ସମାନ୍ତରାଳ ଶବ୍ଦ ଚୟନ କରନ୍ତୁ ।
ଘର

- Ans
- A. ଭବନ
- B. ବରିଷା
- C. ପ୍ରକୋଷ୍ଠ
- D. ଅଗଣା

Question Type : MCQ

Question ID : 4410091676243

Option 1 ID : 4410096613792

Option 2 ID : 4410096613794

Option 3 ID : 4410096613793

Option 4 ID : 4410096613795

Status : Answered

Chosen Option : A

Q.73 ନିମ୍ନରେ ଦିଆଯାଇଥିବା ବିକଳ୍ପ ମଧ୍ୟରୁ ଉପଯୁକ୍ତ ବିପରୀତ ଶବ୍ଦ ଚୟନ କରନ୍ତୁ
ଧଳା

- Ans
- A. ସବୁଜ
- B. କଳା
- C. ହଳଦିଆ
- D. ଧବଳ

Question Type : MCQ

Question ID : 4410091676032

Option 1 ID : 4410096612951

Option 2 ID : 4410096612949

Option 3 ID : 4410096612948

Option 4 ID : 4410096612950

Status : Answered

Chosen Option : B

Q.74 ସେମାନେ ଆସନ୍ତା କାଲି ସୁଦ୍ଧା ସେମାନଙ୍କର ପ୍ରୋଜେକ୍ଟ _____ ।

- Ans
- A. ସମାପ୍ତ କରିଥିଲେ
- B. ସମାପ୍ତ କରିଛନ୍ତି
- C. ସମାପ୍ତ କଲେ
- D. ସମାପ୍ତ କରିବେ

Question Type : MCQ

Question ID : 4410091675608

Option 1 ID : 4410096611292

Option 2 ID : 4410096611293

Option 3 ID : 4410096611294

Option 4 ID : 4410096611295

Status : Answered

Chosen Option : D

Q.75 ଦିଆଯାଇଥିବା ଇଂରାଜୀ ବାକ୍ୟକୁ ଓଡ଼ିଆରେ ଅନୁବାଦ କର।

Delhi metro has become lifeline for Delhites.

- Ans
- A. ଦିଲ୍ଲୀ ମେଟ୍ରୋ ଦିଲ୍ଲୀବାସୀଙ୍କ ପାଇଁ ଜୀବନରେଖା ସ୍ୱରୂପ ହେଉଛି।
- B. ଦିଲ୍ଲୀ ମେଟ୍ରୋ ଦିଲ୍ଲୀବାସୀଙ୍କ ପାଇଁ ଜୀବନରେଖା ପାଲଟିଛି।
- C. ଦିଲ୍ଲୀ ମେଟ୍ରୋ ଦିଲ୍ଲୀବାସୀଙ୍କ ପାଇଁ ଜୀବନରେଖା ପାଲଟି ଯିବ।
- D. ଦିଲ୍ଲୀ ମେଟ୍ରୋ ଦିଲ୍ଲୀବାସୀଙ୍କ ପାଇଁ ଜୀବନରେଖା ପାଲଟି ଥିଲା।

Question Type : MCQ

Question ID : 4410091235144

Option 1 ID : 4410094874317

Option 2 ID : 4410094874316

Option 3 ID : 4410094874315

Option 4 ID : 4410094874314

Status : Answered

Chosen Option : B



Comprehension:

ଦିଆଯାଇଥିବା ଗଦ୍ୟାଂଶଟି ସାବଧାନରେ ପଢ଼ି, ନିମ୍ନୋକ୍ତ ପ୍ରଶ୍ନମାନଙ୍କର ସଠିକ ଉତ୍ତର ପ୍ରଦାନ କର ।

ଜଳ ହିଁ ଜୀବନ । ଏହା ମୌଳିକ ଜୀବନଧାରଣ ଶକ୍ତି । କଥାରେ ଅଛି - "ଜଳ ବହୁଳେ ସୃଷ୍ଟି ନାଶ / ଜଳ ବିହୁନେ ସୃଷ୍ଟି ନାଶ ।" ଜଳ ଯେତେବେଳେ ପ୍ରବଳ ହୋଇଯାଏ, ସେତେବେଳେ ସୃଷ୍ଟି ନାଶ ହୋଇଯାଏ । ଜୀବଜନ୍ତୁ ଗଛଲତା ଓ ଫସଲ ସବୁ ଧୂସ ହୋଇଯାଆନ୍ତି । ସେହିପରି ଜଳର ଅଭାବରେ ସୃଷ୍ଟି ମଧ୍ୟ ଧୂସ ହୋଇଯାଏ । କୌଣସି ଅଞ୍ଚଳରେ ଥିବା ଜଳ ଯୋଗାଣ ସଂସ୍ଥା ଯେତେବେଳେ ଆବଶ୍ୟକତା ଅନୁସାରେ ଜଳ ଯୋଗାଇପାରେ ନାହିଁ, ସେତେବେଳେ ଜଳସଙ୍କଟ ଦେଖାଯାଏ ହାହାକାର ପଡ଼ିଯାଏ । ଏହି ଜଳ ସଙ୍କଟ କାରଣରୁ ପ୍ରତ୍ୟେକ ମହାଦେଶର ପ୍ରାୟ ୨.୮ ବିଲିୟନ ଲୋକେ ପ୍ରତିବର୍ଷ ଏକମାସରୁ ଉର୍ଦ୍ଧ୍ୱକାଳ ଜଳସଙ୍କଟର ସମ୍ମୁଖୀନ ହେଉଅଛନ୍ତି । ପୃଥିବୀର ପ୍ରାୟ ୧.୨ ବିଲିୟନ ଲୋକ ସ୍ୱଳ୍ପ ପାନୀୟ ଜଳ ପାଇପାରୁ ନାହାନ୍ତି । ଜଳାଭାବ ଜଳବାୟୁ ପରିବର୍ତ୍ତନ ପାଇଁ ଘଟିଥାଏ । ଏହା ଫଳରେ ମରୁଡ଼ି ହୁଏ । ବର୍ଷା ଓ ବନ୍ୟା ସମୟରେ ଜଳ ଦୂଷିତ ହୋଇଯିବାରୁ ତାହା ପିଇବା ଉପଯୋଗୀ ହୁଏ ନାହିଁ । ଜଳ ସଙ୍କଟ ଜୀବଜନ୍ତୁ ଓ ମଣିଷମାନଙ୍କ ପାଇଁ ଘୋର ଦୁଃଖ ଓ ବିପର୍ଯ୍ୟୟର କାରଣ ହୁଏ । ସାଧାରଣତଃ ଦେଖାଯାଏ ଯେ ନଦୀର ଜଳ ଜୀବଜନ୍ତୁ ଓ ମଣିଷମାନଙ୍କ ପାଇଁ ଥିଲା ଅମୃତ ସମାନ । ମାତ୍ର ସଂପୃତି ପ୍ରାୟ ନଦୀଗୁଡ଼ିକ ଦୂଷିତ ହୋଇଯାଇଛି । ବହୁ ସଂଖ୍ୟକ ଭାରୀ ଶିଳ୍ପ ନଦୀ ନିକଟରେ ଅବସ୍ଥିତ ଓ ସେସବୁର ପରିଷ୍କୃତ ଦୂଷିତ ଜଳ ନଦୀରେ ମିଶୁଛି । ଯାବତୀୟ ଅଳିଆ ଆବର୍ଜନା, ମୃତ ଶବ ନଦୀ ବନ୍ଧକୁ ଫିଙ୍ଗି ଦିଆଯାଉଛି । ତେଣୁ ନଦୀର ଜଳ ଆଉ ପାନୀୟ ଉପଯୋଗୀ ହେଉ ନାହିଁ । ପୁନଶ୍ଚ ନଦୀଗୁଡ଼ିକ ମଧ୍ୟରୁ ଅଧିକାଂଶ ଶୁଷ୍କ ହୋଇଯାଉଛନ୍ତି । ନଦୀ ଶଯ୍ୟା ପୋତି ହୋଇଯାଉଛି । ଅନ୍ୟପକ୍ଷରେ ନଦୀରୁ ଉଚ୍ଚମତା ସମ୍ପୃକ୍ତ ମୋଟର ସାହାଯ୍ୟରେ ଜଳକୁ ଶିଳ୍ପକାରଖାନାମାନେ ନେଇ ଯାଉଛନ୍ତି । ତେଣୁ ନଦୀ, ପୁଷ୍କରିଣୀ ଆଦିର ଜଳ ଆଉ ପାନୀୟ ଉପଯୋଗୀ ହେଉନାହିଁ । ନଦୀରେ ଜଳସଙ୍କଟ ସୃଷ୍ଟି ହେଉଥିଲାବେଳେ ତଳୁ ନଳକୂପ ବସାଇ ଉଚ୍ଚଶକ୍ତି ସମ୍ପୃକ୍ତ ମୋଟର ସାହାଯ୍ୟରେ ଜଳ ଜଳ ନିଷ୍କାସନ କରାଯାଇ ଶିଳ୍ପ, କୃଷି ଆଦି କ୍ଷେତ୍ରକୁ ଯୋଗାଇ ଦିଆଯାଉଛି । ଏତେ ସଂଖ୍ୟା ରେ ନଳକୂପ ବସାଇ ଭୂପୃଷ୍ଠ ତଳୁ ଜଳ ନିଷ୍କାସନ କରାଯାଉଛି ଯେ ଜଳପତନ ଏବେ ୫୦/୬୦ ଫୁଟ ତଳକୁ ଚାଲିଗଲାଣି । ଏପରି ଏକ ଅବସ୍ଥା ସୃଷ୍ଟି ହୋଇପାରେ ଯେତେବେଳେ ପୃଥିବୀପୃଷ୍ଠ ତଳେଥିବା ଜଳପତନ ଆହୁରି ବହୁ ନିମ୍ନକୁ ଚାଲିଯିବ । ସେତେବେଳେ କ'ଣ ହେବ ପୃଥିବୀର ଭାଗ୍ୟ ?

SubQuestion No : 76

Q.76	ଏହି ଅନୁଛେଦଟି କେଉଁ ପ୍ରକାରର ଗଢ଼ଣରେ ଲେଖାଯାଇଛି?
Ans	<input type="checkbox"/> A. ବର୍ଣନାତ୍ମକ <input type="checkbox"/> B. କ୍ରମାନ୍ୱୟାତ୍ମକ <input type="checkbox"/> C. ତୁଳନାତ୍ମକ <input checked="" type="checkbox"/> D. କାରଣ-ଫଳ

Question Type :	MCQ
Question ID :	4410091191594
Option 1 ID :	4410094700535
Option 2 ID :	4410094700536
Option 3 ID :	4410094700537
Option 4 ID :	4410094700534
Status :	Answered
Chosen Option :	D

Comprehension:

ଦିଆଯାଇଥିବା ଗଦ୍ୟାଂଶଟି ସାବଧାନରେ ପଢ଼ି, ନିମ୍ନୋକ୍ତ ପ୍ରଶ୍ନମାନଙ୍କର ସଠିକ ଉତ୍ତର ପ୍ରଦାନ କର ।

ଜଳ ହିଁ ଜୀବନ । ଏହା ମୌଳିକ ଜୀବନଧାରଣ ଶକ୍ତି । କଥାରେ ଅଛି - "ଜଳ ବହୁଳେ ସୃଷ୍ଟି ନାଶ / ଜଳ ବିହୀନେ ସୃଷ୍ଟି ନାଶ ।" ଜଳ ଯେତେବେଳେ ପ୍ରବଳ ହୋଇଯାଏ, ସେତେବେଳେ ସୃଷ୍ଟି ନାଶ ହୋଇଯାଏ । ଜୀବଜନ୍ତୁ ଗଛଲତା ଓ ଫସଲ ସବୁ ଧୂସ ହୋଇଯାଆନ୍ତି । ସେହିପରି ଜଳର ଅଭାବରେ ସୃଷ୍ଟି ମଧ୍ୟ ଧୂସ ହୋଇଯାଏ । କୌଣସି ଅଞ୍ଚଳରେ ଥିବା ଜଳ ଯୋଗାଣ ସଂସ୍ଥା ଯେତେବେଳେ ଆବଶ୍ୟକତା ଅନୁସାରେ ଜଳ ଯୋଗାଇପାରେ ନାହିଁ, ସେତେବେଳେ ଜଳସଙ୍କଟ ଦେଖାଯାଏ ହାହାକାର ପଡ଼ିଯାଏ । ଏହି ଜଳ ସଙ୍କଟ କାରଣରୁ ପ୍ରତ୍ୟେକ ମହାଦେଶର ପ୍ରାୟ ୨.୮ ବିଲିୟନ ଲୋକେ ପ୍ରତିବର୍ଷ ଏକମାସରୁ ଉର୍ଦ୍ଧ୍ୱକାଳ ଜଳସଙ୍କଟର ସମ୍ମୁଖୀନ ହେଉଅଛନ୍ତି । ପୃଥିବୀର ପ୍ରାୟ ୧.୨ ବିଲିୟନ ଲୋକ ସ୍ୱଳ୍ପ ପାନୀୟ ଜଳ ପାଇପାରୁ ନାହାନ୍ତି । ଜଳାଭାବ ଜଳବାୟୁ ପରିବର୍ତ୍ତନ ପାଇଁ ଘଟିଥାଏ । ଏହା ଫଳରେ ମରୁଡ଼ି ହୁଏ । ବର୍ଷା ଓ ବନ୍ୟା ସମୟରେ ଜଳ ଦୂଷିତ ହୋଇଯିବାରୁ ତାହା ପିଇବା ଉପଯୋଗୀ ହୁଏ ନାହିଁ । ଜଳ ସଙ୍କଟ ଜୀବଜନ୍ତୁ ଓ ମଣିଷମାନଙ୍କ ପାଇଁ ଘୋର ଦୁଃଖ ଓ ବିପର୍ଯ୍ୟୟର କାରଣ ହୁଏ । ସାଧାରଣତଃ ଦେଖାଯାଏ ଯେ ନଦୀର ଜଳ ଜୀବଜନ୍ତୁ ଓ ମଣିଷମାନଙ୍କ ପାଇଁ ଥିଲା ଅମୃତ ସମାନ । ମାତ୍ର ସଂପୃତି ପ୍ରାୟ ନଦୀଗୁଡ଼ିକ ଦୂଷିତ ହୋଇଯାଇଛି । ବହୁ ସଂଖ୍ୟକ ଭାରୀ ଶିଳ୍ପ ନଦୀ ନିକଟରେ ଅବସ୍ଥିତ ଓ ସେସବୁର ପରିଷ୍କୃତ ଦୂଷିତ ଜଳ ନଦୀରେ ମିଶୁଛି । ଯାବତୀୟ ଅଳିଆ ଆବର୍ଜନା, ମୃତ ଶବ ନଦୀ ବନ୍ଧକୁ ଫିଙ୍ଗି ଦିଆଯାଉଛି । ତେଣୁ ନଦୀର ଜଳ ଆଉ ପାନୀୟ ଉପଯୋଗୀ ହେଉ ନାହିଁ । ପୁନଶ୍ଚ ନଦୀଗୁଡ଼ିକ ମଧ୍ୟରୁ ଅଧିକାଂଶ ଶୁଷ୍କ ହୋଇଯାଉଛନ୍ତି । ନଦୀ ଶଯ୍ୟା ପୋତି ହୋଇଯାଉଛି । ଅନ୍ୟପକ୍ଷରେ ନଦୀରୁ ଉଚ୍ଚମତା ସମ୍ପୃକ୍ତ ମୋଟର ସାହାଯ୍ୟରେ ଜଳକୁ ଶିଳ୍ପକାରଖାନାମାନେ ନେଇ ଯାଉଛନ୍ତି । ତେଣୁ ନଦୀ, ପୁଷ୍କରିଣୀ ଆଦିର ଜଳ ଆଉ ପାନୀୟ ଉପଯୋଗୀ ହେଉନାହିଁ । ନଦୀରେ ଜଳସଙ୍କଟ ସୃଷ୍ଟି ହେଉଥିଲାବେଳେ ତଳୁ ନଳକୃପ ବସାଇ ଉଚ୍ଚଶକ୍ତି ସମ୍ପୃକ୍ତ ମୋଟର ସାହାଯ୍ୟରେ ଜଳ ଜଳ ନିଷ୍କାସନ କରାଯାଇ ଶିଳ୍ପ, କୃଷି ଆଦି କ୍ଷେତ୍ରକୁ ଯୋଗାଇ ଦିଆଯାଉଛି । ଏତେ ସଂଖ୍ୟା ରେ ନଳକୃପ ବସାଇ ଭୁପୃଷ୍ଠ ତଳୁ ଜଳ ନିଷ୍କାସନ କରାଯାଉଛି ଯେ ଜଳପତନ ଏବେ ୫୦/୬୦ ଫୁଟ ତଳକୁ ଚାଲିଗଲାଣି । ଏପରି ଏକ ଅବସ୍ଥା ସୃଷ୍ଟି ହୋଇପାରେ ଯେତେବେଳେ ପୃଥିବୀପୃଷ୍ଠ ତଳେଥିବା ଜଳପତନ ଆହୁରି ବହୁ ନିମ୍ନକୁ ଚାଲିଯିବ । ସେତେବେଳେ କ'ଣ ହେବ ପୃଥିବୀର ଭାଗ୍ୟ ?

SubQuestion No : 77

Q.77	ଏହି ଗଦ୍ୟାଂଶ ପାଇଁ ସବୁଠାରୁ ଉପଯୁକ୍ତ ଶୀର୍ଷକ କ'ଣ?
Ans	<input type="checkbox"/> A. ବର୍ଷାର ସୁନ୍ଦର୍ଯ୍ୟ <input type="checkbox"/> B. ପୃଥିବୀର ଜଳଚକ୍ର <input checked="" type="checkbox"/> C. ଜଳସଙ୍କଟ: କାରଣ ଓ ପରିଣାମ <input type="checkbox"/> D. ନଦୀର ସୌନ୍ଦର୍ଯ୍ୟ

Question Type :	MCQ
Question ID :	4410091191595
Option 1 ID :	4410094700541
Option 2 ID :	4410094700539
Option 3 ID :	4410094700540
Option 4 ID :	4410094700538
Status :	Answered
Chosen Option :	C

Comprehension:

ଦିଆଯାଇଥିବା ଗଦ୍ୟାଂଶଟି ସାବଧାନରେ ପଢ଼ି, ନିମ୍ନୋକ୍ତ ପ୍ରଶ୍ନମାନଙ୍କର ସଠିକ ଉତ୍ତର ପ୍ରଦାନ କର ।

ଜଳ ହିଁ ଜୀବନ । ଏହା ମୌଳିକ ଜୀବନଧାରଣ ଶକ୍ତି । କଥାରେ ଅଛି - "ଜଳ ବହୁଳେ ସୃଷ୍ଟି ନାଶ / ଜଳ ବିହୀନେ ସୃଷ୍ଟି ନାଶ ।" ଜଳ ଯେତେବେଳେ ପ୍ରବଳ ହୋଇଯାଏ, ସେତେବେଳେ ସୃଷ୍ଟି ନାଶ ହୋଇଯାଏ । ଜୀବଜନ୍ତୁ ଗଛଲତା ଓ ଫସଲ ସବୁ ଧୂସ ହୋଇଯାଆନ୍ତି । ସେହିପରି ଜଳର ଅଭାବରେ ସୃଷ୍ଟି ମଧ୍ୟ ଧୂସ ହୋଇଯାଏ । କୌଣସି ଅଞ୍ଚଳରେ ଥିବା ଜଳ ଯୋଗାଣ ସଂସ୍ଥା ଯେତେବେଳେ ଆବଶ୍ୟକତା ଅନୁସାରେ ଜଳ ଯୋଗାଇପାରେ ନାହିଁ, ସେତେବେଳେ ଜଳସଙ୍କଟ ଦେଖାଯାଏ ହାହାକାର ପଡ଼ିଯାଏ । ଏହି ଜଳ ସଙ୍କଟ କାରଣରୁ ପ୍ରତ୍ୟେକ ମହାଦେଶର ପ୍ରାୟ ୨.୮ ବିଲିୟନ ଲୋକେ ପ୍ରତିବର୍ଷ ଏକମାସରୁ ଉର୍ଦ୍ଧ୍ୱକାଳ ଜଳସଙ୍କଟର ସମ୍ମୁଖୀନ ହେଉଅଛନ୍ତି । ପୃଥିବୀର ପ୍ରାୟ ୧.୨ ବିଲିୟନ ଲୋକ ସ୍ୱଳ୍ପ ପାନୀୟ ଜଳ ପାଇପାରୁ ନାହାନ୍ତି । ଜଳାଭାବ ଜଳବାୟୁ ପରିବର୍ତ୍ତନ ପାଇଁ ଘଟିଥାଏ । ଏହା ଫଳରେ ମରୁଡ଼ି ହୁଏ । ବର୍ଷା ଓ ବନ୍ୟା ସମୟରେ ଜଳ ଦୂଷିତ ହୋଇଯିବାରୁ ତାହା ପିଇବା ଉପଯୋଗୀ ହୁଏ ନାହିଁ । ଜଳ ସଙ୍କଟ ଜୀବଜନ୍ତୁ ଓ ମଣିଷମାନଙ୍କ ପାଇଁ ଘୋର ଦୁଃଖ ଓ ବିପର୍ଯ୍ୟୟର କାରଣ ହୁଏ । ସାଧାରଣତଃ ଦେଖାଯାଏ ଯେ ନଦୀର ଜଳ ଜୀବଜନ୍ତୁ ଓ ମଣିଷମାନଙ୍କ ପାଇଁ ଥିଲା ଅମୃତ ସମାନ । ମାତ୍ର ସଂପୃତି ପ୍ରାୟ ନଦୀଗୁଡ଼ିକ ଦୂଷିତ ହୋଇଯାଇଛି । ବହୁ ସଂଖ୍ୟକ ଭାରୀ ଶିଳ୍ପ ନଦୀ ନିକଟରେ ଅବସ୍ଥିତ ଓ ସେସବୁର ପରିତ୍ୟକ୍ତ ଦୂଷିତ ଜଳ ନଦୀରେ ମିଶୁଛି । ଯାବତୀୟ ଅଳିଆ ଆବର୍ଜନା, ମୃତ ଶବ ନଦୀ ବନ୍ଧକୁ ଫିଙ୍ଗି ଦିଆଯାଉଛି । ତେଣୁ ନଦୀର ଜଳ ଆଉ ପାନୀୟ ଉପଯୋଗୀ ହେଉ ନାହିଁ । ପୁନଶ୍ଚ ନଦୀଗୁଡ଼ିକ ମଧ୍ୟରୁ ଅଧିକାଂଶ ଶୁଷ୍କ ହୋଇଯାଉଛନ୍ତି । ନଦୀ ଶଯ୍ୟା ପୋତି ହୋଇଯାଉଛି । ଅନ୍ୟପକ୍ଷରେ ନଦୀରୁ ଉଚ୍ଚମତା ସମ୍ପୃକ୍ତ ମୋଟର ସାହାଯ୍ୟରେ ଜଳକୁ ଶିଳ୍ପକାରଖାନାମାନେ ନେଇ ଯାଉଛନ୍ତି । ତେଣୁ ନଦୀ, ପୁଷ୍କରିଣୀ ଆଦିର ଜଳ ଆଉ ପାନୀୟ ଉପଯୋଗୀ ହେଉନାହିଁ । ନଦୀରେ ଜଳସଙ୍କଟ ସୃଷ୍ଟି ହେଉଥିଲାବେଳେ ତଳୁ ନଳକୃପ ବସାଇ ଉଚ୍ଚଶକ୍ତି ସମ୍ପୃକ୍ତ ମୋଟର ସାହାଯ୍ୟରେ ଜଳ ଜଳ ନିଷ୍କାସନ କରାଯାଇ ଶିଳ୍ପ, କୃଷି ଆଦି କ୍ଷେତ୍ରକୁ ଯୋଗାଇ ଦିଆଯାଉଛି । ଏତେ ସଂଖ୍ୟା ରେ ନଳକୃପ ବସାଇ ଭୁପୃଷ୍ଠ ତଳୁ ଜଳ ନିଷ୍କାସନ କରାଯାଉଛି ଯେ ଜଳପତନ ଏବେ ୫୦/୬୦ ଫୁଟ ତଳକୁ ଚାଲିଗଲାଣି । ଏପରି ଏକ ଅବସ୍ଥା ସୃଷ୍ଟି ହୋଇପାରେ ଯେତେବେଳେ ପୃଥିବୀପୃଷ୍ଠ ତଳେଥିବା ଜଳପତନ ଆହୁରି ବହୁ ନିମ୍ନକୁ ଚାଲିଯିବ । ସେତେବେଳେ କ'ଣ ହେବ ପୃଥିବୀର ଭାଗ୍ୟ ?

SubQuestion No : 78

Q.78 ଗଦ୍ୟାଂଶରେ କେଉଁ ସୂଚନା ବାସ୍ତବ ଜୀବନ ପରିସ୍ଥିତି ସହିତ ସବୁଠାରୁ ଅଧିକ ସମ୍ପର୍କିତ?

- Ans**
- A. ପୁଷ୍କରିଣୀର ସୌନ୍ଦର୍ଯ୍ୟ
 - B. ଜଳର ରଙ୍ଗ
 - C. ପୁରୁଣା ନଦୀ ପାଳା
 - D. ବର୍ଷାରେ ଜଳଦୂଷଣ

Question Type :	MCQ
Question ID :	4410091191596
Option 1 ID :	4410094700543
Option 2 ID :	4410094700545
Option 3 ID :	4410094700544
Option 4 ID :	4410094700542
Status :	Answered
Chosen Option :	C

Comprehension:

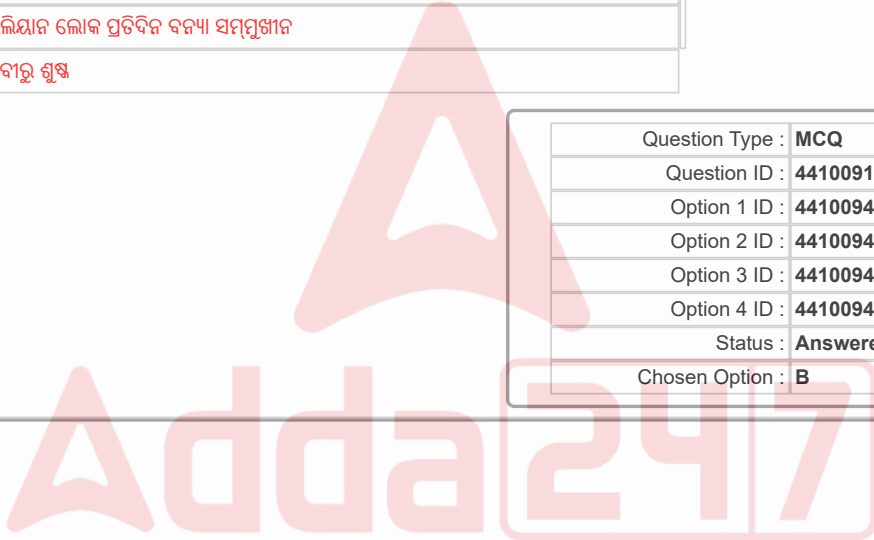
ଦିଆଯାଇଥିବା ଗଦ୍ୟାଂଶଟି ସାବଧାନରେ ପଢ଼ି, ନିମ୍ନୋକ୍ତ ପ୍ରଶ୍ନମାନଙ୍କର ସଠିକ ଉତ୍ତର ପ୍ରଦାନ କର ।

ଜଳ ହିଁ ଜୀବନ । ଏହା ମୌଳିକ ଜୀବନଧାରଣ ଶକ୍ତି । କଥାରେ ଅଛି - "ଜଳ ବହୁଳେ ସୃଷ୍ଟି ନାଶ / ଜଳ ବିହୁନେ ସୃଷ୍ଟି ନାଶ ।" ଜଳ ଯେତେବେଳେ ପ୍ରବଳ ହୋଇଯାଏ, ସେତେବେଳେ ସୃଷ୍ଟି ନାଶ ହୋଇଯାଏ । ଜୀବଜନ୍ତୁ ଗଛଲତା ଓ ଫସଲ ସବୁ ଧୂସ ହୋଇଯାଆନ୍ତି । ସେହିପରି ଜଳର ଅଭାବରେ ସୃଷ୍ଟି ମଧ୍ୟ ଧୂସ ହୋଇଯାଏ । କୌଣସି ଅଞ୍ଚଳରେ ଥିବା ଜଳ ଯୋଗାଣ ସଂସ୍ଥା ଯେତେବେଳେ ଆବଶ୍ୟକତା ଅନୁସାରେ ଜଳ ଯୋଗାଇପାରେ ନାହିଁ, ସେତେବେଳେ ଜଳସଙ୍କଟ ଦେଖାଯାଏ ହାହାକାର ପଡ଼ିଯାଏ । ଏହି ଜଳ ସଙ୍କଟ କାରଣରୁ ପ୍ରତ୍ୟେକ ମହାଦେଶର ପ୍ରାୟ ୨.୮ ବିଲିୟନ ଲୋକେ ପ୍ରତିବର୍ଷ ଏକମାସରୁ ଉର୍ଦ୍ଧ୍ୱକାଳ ଜଳସଙ୍କଟର ସମ୍ମୁଖୀନ ହେଉଅଛନ୍ତି । ପୃଥିବୀର ପ୍ରାୟ ୧.୨ ବିଲିୟନ ଲୋକ ସ୍ୱଳ୍ପ ପାନୀୟ ଜଳ ପାଇପାରୁ ନାହାନ୍ତି । ଜଳାଭାବ ଜଳବାୟୁ ପରିବର୍ତ୍ତନ ପାଇଁ ଘଟିଥାଏ । ଏହା ଫଳରେ ମରୁଡ଼ି ହୁଏ । ବର୍ଷା ଓ ବନ୍ୟା ସମୟରେ ଜଳ ଦୂଷିତ ହୋଇଯିବାରୁ ତାହା ପିଇବା ଉପଯୋଗୀ ହୁଏ ନାହିଁ । ଜଳ ସଙ୍କଟ ଜୀବଜନ୍ତୁ ଓ ମଣିଷମାନଙ୍କ ପାଇଁ ଘୋର ଦୁଃଖ ଓ ବିପର୍ଯ୍ୟୟର କାରଣ ହୁଏ । ସାଧାରଣତଃ ଦେଖାଯାଏ ଯେ ନଦୀର ଜଳ ଜୀବଜନ୍ତୁ ଓ ମଣିଷମାନଙ୍କ ପାଇଁ ଥିଲା ଅମୃତ ସମାନ । ମାତ୍ର ସଂପୃତି ପ୍ରାୟ ନଦୀଗୁଡ଼ିକ ଦୂଷିତ ହୋଇଯାଇଛି । ବହୁ ସଂଖ୍ୟକ ଭାରୀ ଶିଳ୍ପ ନଦୀ ନିକଟରେ ଅବସ୍ଥିତ ଓ ସେସବୁର ପରିଷ୍କୃତ ଦୂଷିତ ଜଳ ନଦୀରେ ମିଶୁଛି । ଯାବତୀୟ ଅଳିଆ ଆବର୍ଜନା, ମୃତ ଶବ ନଦୀ ବନ୍ଧକୁ ଫିଙ୍ଗି ଦିଆଯାଉଛି । ତେଣୁ ନଦୀର ଜଳ ଆଉ ପାନୀୟ ଉପଯୋଗୀ ହେଉ ନାହିଁ । ପୁନଶ୍ଚ ନଦୀଗୁଡ଼ିକ ମଧ୍ୟରୁ ଅଧିକାଂଶ ଶୁଷ୍କ ହୋଇଯାଉଛନ୍ତି । ନଦୀ ଶଯ୍ୟା ପୋତି ହୋଇଯାଉଛି । ଅନ୍ୟପକ୍ଷରେ ନଦୀରୁ ଉଚ୍ଚମତା ସମ୍ପୃକ୍ତ ମୋଟର ସାହାଯ୍ୟରେ ଜଳକୁ ଶିଳ୍ପକାରଖାନାମାନେ ନେଇ ଯାଉଛନ୍ତି । ତେଣୁ ନଦୀ, ପୁଷ୍କରିଣୀ ଆଦିର ଜଳ ଆଉ ପାନୀୟ ଉପଯୋଗୀ ହେଉନାହିଁ । ନଦୀରେ ଜଳସଙ୍କଟ ସୃଷ୍ଟି ହେଉଥିଲାବେଳେ ତଳୁ ନଳକୂପ ବସାଇ ଉଚ୍ଚଶକ୍ତି ସମ୍ପୃକ୍ତ ମୋଟର ସାହାଯ୍ୟରେ ଜଳ ଜଳ ନିଷ୍କାସନ କରାଯାଇ ଶିଳ୍ପ, କୃଷି ଆଦି କ୍ଷେତ୍ରକୁ ଯୋଗାଇ ଦିଆଯାଉଛି । ଏତେ ସଂଖ୍ୟା ରେ ନଳକୂପ ବସାଇ ଭୂପୃଷ୍ଠ ତଳୁ ଜଳ ନିଷ୍କାସନ କରାଯାଉଛି ଯେ ଜଳପତନ ଏବେ ୫୦/୬୦ ଫୁଟ ତଳକୁ ଚାଲିଗଲାଣି । ଏପରି ଏକ ଅବସ୍ଥା ସୃଷ୍ଟି ହୋଇପାରେ ଯେତେବେଳେ ପୃଥିବୀପୃଷ୍ଠ ତଳେଥିବା ଜଳପତନ ଆହୁରି ବହୁ ନିମ୍ନକୁ ଚାଲିଯିବ । ସେତେବେଳେ କ'ଣ ହେବ ପୃଥିବୀର ଭାଗ୍ୟ ?

SubQuestion No : 79

Q.79	ଗଦ୍ୟାଂଶରେ ଦିଆଯାଇଥିବା କେଉଁ ତଥ୍ୟ ସଠିକ୍ ?
Ans	<p><input checked="" type="checkbox"/> A. ପୃଥିବୀର ୩.୫ ବିଲିୟନ ଲୋକ ସାଗରରେ ବସନ୍ତି</p> <p><input checked="" type="checkbox"/> B. ପୃଥିବୀର ୧.୨ ବିଲିୟନ ଲୋକ ପାନୀୟ ଜଳ ପାଇପାରୁନାହାନ୍ତି</p> <p><input checked="" type="checkbox"/> C. ପୃଥିବୀର ୪.୨ ବିଲିୟନ ଲୋକ ପ୍ରତିଦିନ ବନ୍ୟା ସମ୍ମୁଖୀନ</p> <p><input checked="" type="checkbox"/> D. ୫୦% ନଦୀ ପୃଥିବୀରୁ ଶୁଷ୍କ</p>

Question Type :	MCQ
Question ID :	4410091191597
Option 1 ID :	4410094700547
Option 2 ID :	4410094700546
Option 3 ID :	4410094700549
Option 4 ID :	4410094700548
Status :	Answered
Chosen Option :	B



Comprehension:

ଦିଆଯାଇଥିବା ଗଦ୍ୟାଂଶଟି ସାବଧାନରେ ପଢ଼ି, ନିମ୍ନୋକ୍ତ ପ୍ରଶ୍ନମାନଙ୍କର ସଠିକ ଉତ୍ତର ପ୍ରଦାନ କର ।

ଜଳ ହିଁ ଜୀବନ । ଏହା ମୌଳିକ ଜୀବନଧାରଣ ଶକ୍ତି । କଥାରେ ଅଛି - “ଜଳ ବହୁଳେ ସୃଷ୍ଟି ନାଶ / ଜଳ ବିହୀନେ ସୃଷ୍ଟି ନାଶ ।” ଜଳ ଯେତେବେଳେ ପ୍ରବଳ ହୋଇଯାଏ, ସେତେବେଳେ ସୃଷ୍ଟି ନାଶ ହୋଇଯାଏ । ଜୀବଜନ୍ତୁ ଗଛଲତା ଓ ଫସଲ ସବୁ ଧୂସ ହୋଇଯାଆନ୍ତି । ସେହିପରି ଜଳର ଅଭାବରେ ସୃଷ୍ଟି ମଧ୍ୟ ଧୂସ ହୋଇଯାଏ । କୌଣସି ଅଞ୍ଚଳରେ ଥିବା ଜଳ ଯୋଗାଣ ସଂସ୍ଥା ଯେତେବେଳେ ଆବଶ୍ୟକତା ଅନୁସାରେ ଜଳ ଯୋଗାଇପାରେ ନାହିଁ, ସେତେବେଳେ ଜଳସଙ୍କଟ ଦେଖାଯାଏ ହାହାକାର ପଡ଼ିଯାଏ । ଏହି ଜଳ ସଙ୍କଟ କାରଣରୁ ପ୍ରତ୍ୟେକ ମହାଦେଶର ପ୍ରାୟ ୨.୮ ବିଲିୟନ ଲୋକେ ପ୍ରତିବର୍ଷ ଏକମାସରୁ ଉର୍ଦ୍ଧ୍ୱକାଳ ଜଳସଙ୍କଟର ସମ୍ମୁଖୀନ ହେଉଅଛନ୍ତି । ପୃଥିବୀର ପ୍ରାୟ ୧.୨ ବିଲିୟନ ଲୋକ ସ୍ୱଳ୍ପ ପାନୀୟ ଜଳ ପାଇପାରୁ ନାହାନ୍ତି । ଜଳାଭାବ ଜଳବାୟୁ ପରିବର୍ତ୍ତନ ପାଇଁ ଘଟିଥାଏ । ଏହା ଫଳରେ ମରୁଡ଼ି ହୁଏ । ବର୍ଷା ଓ ବନ୍ୟା ସମୟରେ ଜଳ ଦୂଷିତ ହୋଇଯିବାରୁ ତାହା ପିଇବା ଉପଯୋଗୀ ହୁଏ ନାହିଁ । ଜଳ ସଙ୍କଟ ଜୀବଜନ୍ତୁ ଓ ମଣିଷମାନଙ୍କ ପାଇଁ ଘୋର ଦୁଃଖ ଓ ବିପର୍ଯ୍ୟୟର କାରଣ ହୁଏ । ସାଧାରଣତଃ ଦେଖାଯାଏ ଯେ ନଦୀର ଜଳ ଜୀବଜନ୍ତୁ ଓ ମଣିଷମାନଙ୍କ ପାଇଁ ଥିଲା ଅମୃତ ସମାନ । ମାତ୍ର ସଂପୃତି ପ୍ରାୟ ନଦୀଗୁଡ଼ିକ ଦୂଷିତ ହୋଇଯାଇଛି । ବହୁ ସଂଖ୍ୟକ ଭାରୀ ଶିଳ୍ପ ନଦୀ ନିକଟରେ ଅବସ୍ଥିତ ଓ ସେସବୁର ପରିଷ୍କୃତ ଦୂଷିତ ଜଳ ନଦୀରେ ମିଶୁଛି । ଯାବତୀୟ ଅଳିଆ ଆବର୍ଜନା, ମୃତ ଶବ ନଦୀ ବନ୍ଧକୁ ଫିଙ୍ଗି ଦିଆଯାଉଛି । ତେଣୁ ନଦୀର ଜଳ ଆଉ ପାନୀୟ ଉପଯୋଗୀ ହେଉ ନାହିଁ । ପୁନଶ୍ଚ ନଦୀଗୁଡ଼ିକ ମଧ୍ୟରୁ ଅଧିକାଂଶ ଶୁଷ୍କ ହୋଇଯାଉଛନ୍ତି । ନଦୀ ଶଯ୍ୟା ପୋତି ହୋଇଯାଉଛି । ଅନ୍ୟପକ୍ଷରେ ନଦୀରୁ ଉଚ୍ଚମତା ସମ୍ପୃକ୍ତ ମୋଟର ସାହାଯ୍ୟରେ ଜଳକୁ ଶିଳ୍ପକାରଖାନାମାନେ ନେଇ ଯାଉଛନ୍ତି । ତେଣୁ ନଦୀ, ପୁଷ୍କରିଣୀ ଆଦିର ଜଳ ଆଉ ପାନୀୟ ଉପଯୋଗୀ ହେଉନାହିଁ । ନଦୀରେ ଜଳସଙ୍କଟ ସୃଷ୍ଟି ହେଉଥିଲାବେଳେ ତଳୁ ନଳକୂପ ବସାଇ ଉଚ୍ଚଶକ୍ତି ସମ୍ପୃକ୍ତ ମୋଟର ସାହାଯ୍ୟରେ ଜଳ ଜଳ ନିଷ୍କାସନ କରାଯାଇ ଶିଳ୍ପ, କୃଷି ଆଦି କ୍ଷେତ୍ରକୁ ଯୋଗାଇ ଦିଆଯାଉଛି । ଏତେ ସଂଖ୍ୟା ରେ ନଳକୂପ ବସାଇ ଭୂପୃଷ୍ଠ ତଳୁ ଜଳ ନିଷ୍କାସନ କରାଯାଉଛି ଯେ ଜଳପତନ ଏବେ ୫୦/୬୦ ଫୁଟ ତଳକୁ ଚାଲିଗଲାଣି । ଏପରି ଏକ ଅବସ୍ଥା ସୃଷ୍ଟି ହୋଇପାରେ ଯେତେବେଳେ ପୃଥିବୀପୃଷ୍ଠ ତଳେଥିବା ଜଳପତନ ଆହୁରି ବହୁ ନିମ୍ନକୁ ଚାଲିଯିବ । ସେତେବେଳେ କ’ଣ ହେବ ପୃଥିବୀର ଭାଗ୍ୟ ?

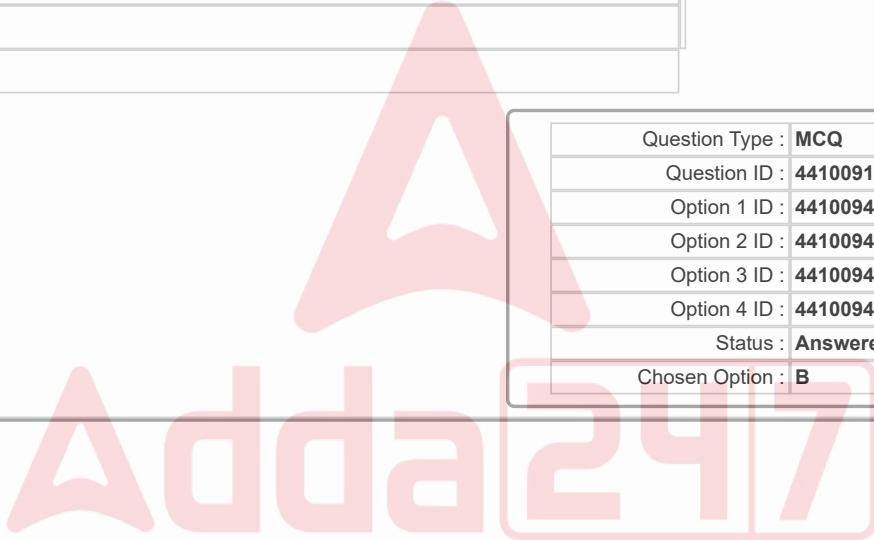
SubQuestion No : 80

Q.80 “ସୃଷ୍ଟି” ଶବ୍ଦର ସମାନାର୍ଥକ କ’ଣ?

- Ans**
- A. ବିନାଶ
 - B. ନିର୍ମାଣ
 - C. ପ୍ରଲୟ
 - D. ପୃଥିବୀ

Question Type :	MCQ
Question ID :	4410091191598
Option 1 ID :	4410094700553
Option 2 ID :	4410094700552
Option 3 ID :	4410094700550
Option 4 ID :	4410094700551
Status :	Answered
Chosen Option :	B

Section : Computer



Q.81 In Excel 2021, to sort data in ascending order (A to Z or smallest to largest), which command should you use?

- Ans**
- A. Sort Ascending
 - B. Custom Sort
 - C. A to Z
 - D. Z to A

Question Type :	MCQ
Question ID :	4410091450525
Option 1 ID :	4410095730563
Option 2 ID :	4410095730565
Option 3 ID :	4410095730564
Option 4 ID :	4410095730562
Status :	Answered
Chosen Option :	B

Q.82 To insert a new slide, you can use the shortcut:

- Ans**
- A. Ctrl + P
 - B. Ctrl + M
 - C. Ctrl + O
 - D. Ctrl + N

Question Type :	MCQ
Question ID :	4410091449049
Option 1 ID :	4410095724663
Option 2 ID :	4410095724660
Option 3 ID :	4410095724662
Option 4 ID :	4410095724661
Status :	Answered
Chosen Option :	B

Q.83 Which of the following is an example of a desktop element in Windows 10?

- Ans**
- A. BIOS
 - B. Taskbar
 - C. File System
 - D. Command Prompt

Question Type :	MCQ
Question ID :	4410091447127
Option 1 ID :	4410095717131
Option 2 ID :	4410095717130
Option 3 ID :	4410095717133
Option 4 ID :	4410095717132
Status :	Answered
Chosen Option :	B

Q.84 A Local Area Network (LAN) is best described by which of the following?

- Ans**
- A. A network that connects computers across different countries
 - B. A wireless network that connects mobile phones only
 - C. A network used to connect satellites in space
 - D. A network that connects computers within a small geographical area, like an office or building

Question Type :	MCQ
Question ID :	4410091442758
Option 1 ID :	4410095699612
Option 2 ID :	4410095699613
Option 3 ID :	4410095699614
Option 4 ID :	4410095699611
Status :	Answered
Chosen Option :	D

Q.85 What is the main purpose of computer security in an organization?

- Ans**
- A. To increase the number of computers in the organization
 - B. To prevent physical damage to computer hardware
 - C. To protect data confidentiality, integrity, and availability from unauthorized access
 - D. To provide faster internet access to employees

Question Type :	MCQ
Question ID :	4410091446861
Option 1 ID :	4410095716093
Option 2 ID :	4410095716090
Option 3 ID :	4410095716091
Option 4 ID :	4410095716092
Status :	Answered
Chosen Option :	C

Q.86 In Microsoft Word 2021, the Define New Bullet option is used to:

- Ans**
- A. Insert a numbered list
 - B. Create a custom bullet style
 - C. Change paragraph alignment
 - D. Change line spacing

Question Type :	MCQ
Question ID :	4410091450130
Option 1 ID :	4410095729031
Option 2 ID :	4410095729029
Option 3 ID :	4410095729030
Option 4 ID :	4410095729028
Status :	Answered
Chosen Option :	B

Q.87 In Microsoft Excel, which tab contains the commands to sort data in ascending or descending order?

- Ans**
- A. Insert
 - B. Data
 - C. Review
 - D. Home

Question Type :	MCQ
Question ID :	4410091467543
Option 1 ID :	4410095798048
Option 2 ID :	4410095798049
Option 3 ID :	4410095798050
Option 4 ID :	4410095798047
Status :	Answered
Chosen Option :	C

Q.88 Which of the following is a key advantage of using credit/debit cards and e-wallets?

- Ans**
- A. They cannot be used for online purchases.
 - B. They require carrying cash for every payment.
 - C. They are completely free and have no security features.
 - D. They enable cashless and electronic payments.

Question Type :	MCQ
Question ID :	4410091453058
Option 1 ID :	4410095740538
Option 2 ID :	4410095740536
Option 3 ID :	4410095740539
Option 4 ID :	4410095740537
Status :	Answered
Chosen Option :	D

Q.89 Application software differs from system software because it:

- Ans**
- A. Controls system operations
 - B. Runs hardware directly
 - C. Manages files
 - D. Helps users perform specific tasks

Question Type :	MCQ
Question ID :	4410091441371
Option 1 ID :	4410095694134
Option 2 ID :	4410095694131
Option 3 ID :	4410095694132
Option 4 ID :	4410095694133
Status :	Answered
Chosen Option :	D

Q.90 Which visual tool in Microsoft Word 2021 is used for precisely setting margins, indents, and tab stops?

- Ans**
- A. Styles
 - B. Ruler
 - C. Effects
 - D. Emphasis

Question Type :	MCQ
Question ID :	4410091478410
Option 1 ID :	4410095840984
Option 2 ID :	4410095840986
Option 3 ID :	4410095840983
Option 4 ID :	4410095840985
Status :	Answered
Chosen Option :	B

Q.91 In Microsoft Excel 2020, which Fill Series option generates a date list excluding weekends?

- Ans**
- A. Fill Series → Type: Text → AutoFill
 - B. Fill Series → Type: Date → Date Unit: Day
 - C. Fill Series → Type: Date → Date Unit: Month
 - D. Fill Series → Type: Date → Date Unit: Weekday

Question Type :	MCQ
Question ID :	4410091448238
Option 1 ID :	4410095721446
Option 2 ID :	4410095721444
Option 3 ID :	4410095721447
Option 4 ID :	4410095721445
Status :	Answered
Chosen Option :	D

Q.92 Which feature in MS Word allows you to automatically correct common spelling or typing errors as you type?

- Ans**
- A. AutoCorrect
 - B. Spelling & Grammar Check
 - C. Track Changes
 - D. Find and Replace

Question Type :	MCQ
Question ID :	4410091423434
Option 1 ID :	4410095622566
Option 2 ID :	4410095622565
Option 3 ID :	4410095622567
Option 4 ID :	4410095622568
Status :	Answered
Chosen Option :	A

Q.93 What is a carousel post on Instagram?

- Ans**
- A. A single image post
 - B. A post with multiple photos or videos
 - C. A live video
 - D. A story post

Question Type :	MCQ
Question ID :	4410091451991
Option 1 ID :	4410095736409
Option 2 ID :	4410095736407
Option 3 ID :	4410095736408
Option 4 ID :	4410095736406
Status :	Answered
Chosen Option :	B

Q.94 Which of the following is an example of application software?

- Ans**
- A. BIOS
 - B. Linux
 - C. Windows 10
 - D. MS Excel

Question Type :	MCQ
Question ID :	4410091451283
Option 1 ID :	4410095733611
Option 2 ID :	4410095733608
Option 3 ID :	4410095733610
Option 4 ID :	4410095733609
Status :	Answered
Chosen Option :	D

Q.95 Microsoft Word, Google Chrome, and Adobe Photoshop primarily serve end-users by performing specific tasks. These programs are best categorized as:

- Ans**
- A. System Software
 - B. Application Software
 - C. Operating Systems
 - D. Utility Software

Question Type :	MCQ
Question ID :	4410091425327
Option 1 ID :	4410095629915
Option 2 ID :	4410095629916
Option 3 ID :	4410095629918
Option 4 ID :	4410095629917
Status :	Answered
Chosen Option :	B

Q.96 Which of the following is the primary function of a firewall?

- Ans**
- A. Manage storage space
 - B. Improve screen resolution
 - C. Increase processor speed
 - D. Block unauthorized access

Question Type :	MCQ
Question ID :	4410091428772
Option 1 ID :	4410095643610
Option 2 ID :	4410095643609
Option 3 ID :	4410095643607
Option 4 ID :	4410095643608
Status :	Answered
Chosen Option :	D

Q.97 Which of the following is not a typical business model classification for e-commerce?

- Ans**
- A. Consumer-to-Consumer (C2C)
 - B. Business-to-Business (B2B)
 - C. Business-to-Consumer (B2C)
 - D. Business-to-Commission Agents (B2A)

Question Type :	MCQ
Question ID :	4410091456278
Option 1 ID :	4410095753460
Option 2 ID :	4410095753459
Option 3 ID :	4410095753458
Option 4 ID :	4410095753461
Status :	Answered
Chosen Option :	A

Q.98 What is the correct file extension for a PowerPoint template?

- Ans**
- A. .potx
 - B. .pptm
 - C. .ppsx
 - D. .pptx

Question Type :	MCQ
Question ID :	4410091458176
Option 1 ID :	4410095760982
Option 2 ID :	4410095760983
Option 3 ID :	4410095760981
Option 4 ID :	4410095760980
Status :	Answered
Chosen Option :	A

Test

Prime

By Adda247

Previous Year Papers PDF

PRACTICE MORE, SCORE HIGHER!



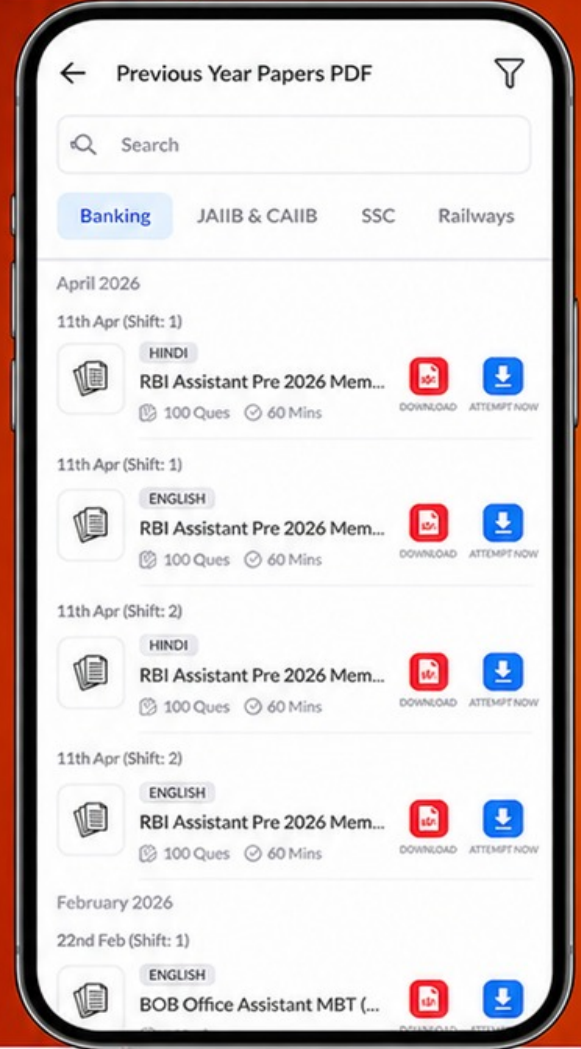
Free
25,000+
PDF's

High-Quality | Exam-Wise | Updated Regularly

ATTEMPT AS
MOCK



Turn PDFs into real exam experience.
Analyze. Improve. Succeed.



Topic-wise & Exam-wise PDFs



Download & Study Offline



Attempt as Mock & Track Score



Smart Analysis & Performance

AVAILABLE IN



Banking



SSC



Railway



Teaching



UGC



Agriculture



Nursing



Bihar



UP



Punjab



WB



Odisha



TN



AP & Telangana



Haryana



DOWNLOAD THE APP



Q.99 After pressing Ctrl + O in PowerPoint, what happens next?

- Ans**
- A. The Save dialog box appears.
 - B. The Open dialog box appears to select an existing file.
 - C. The print preview window opens.
 - D. The program exits.

Question Type :	MCQ
Question ID :	4410091452236
Option 1 ID :	4410095737348
Option 2 ID :	4410095737349
Option 3 ID :	4410095737351
Option 4 ID :	4410095737350
Status :	Answered
Chosen Option :	B

Q.100 Why is computer system security important?

- Ans**
- A. To protect data and resources from unauthorized access
 - B. To slow down processing speed
 - C. To increase software size
 - D. To make systems more complex

Question Type :	MCQ
Question ID :	4410091420613
Option 1 ID :	4410095611370
Option 2 ID :	4410095611369
Option 3 ID :	4410095611372
Option 4 ID :	4410095611371
Status :	Answered
Chosen Option :	A