

AIIMS

**Previous Year Paper
Storekeeper-cum-Clerk
16 Sept, 2023**



Test
Prime

By Adda247

ALL EXAMS, ONE SUBSCRIPTION



Test. Analyze. Improve. Repeat.



Don't just **prepare**. **Perform**.

Test Prime — built only for mock tests.



1,50,000+
Mock Tests



25,000+
Previous Year Papers



800+
Exam Covered



500% Refund
on Selection



5 lakh+
Free Quizzes



Daily
Free PDFs



Job Alerts
Stay Updated

- Multilingual
- Detailed Solution
- Strong and Weak Areas



**All India
Rankings**

Compete with lakhs.
Rank. Improve. Repeat.



← Adda247 test prime

Rating ▾

Editors' choice

New



Adda247 Test Prime
Adda Education • Education
Installed



DOWNLOAD THE APP





AII INDIA INSTITUTE OF MEDICAL SCIENCES, PATNA

अखिल भारतीय आयुर्विज्ञान संस्थान ,पटना

Participant ID	
Participant Name	
Test Center Name	
Test Date	16/09/2023
Test Time	2:00 PM - 5:00 PM
Subject	Storekeeper Cum Clerk

Section : General Intelligence and Reasoning

Q.1 Choose the figure which is different from the rest.

Ans

✓ 1.



✗ 2.



✗ 3.



✗ 4.



Question Type : MCQ

Question ID : 630680366923

Status : Answered

Chosen Option : 1

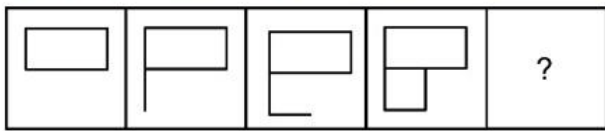
Marks : 1

Q.2 Which two signs should be interchanged to make the given equation correct?
 $30 \div 10 \times 15 - 33 + 22 = 9$

- Ans
- 1. \times and $=$
 - 2. $-$ and $=$
 - 3. \times and \div
 - 4. \times and $-$

Question Type : MCQ
 Question ID : 630680366928
 Status : Answered
 Chosen Option : 3
 Marks : 1

Q.3 Select the figure that will replace the question mark (?) in the following figure series.



Ans

- 1.
- 2.
- 3.
- 4.

Question Type : MCQ
 Question ID : 630680366920
 Status : Answered
 Chosen Option : 3
 Marks : 1

Q.4 Calculate the product of 9.567 and 4.236 and round the answer to three decimal places.

- Ans
- 1. 43.553
 - 2. 40.53
 - 3. 42.543
 - 4. 40.526

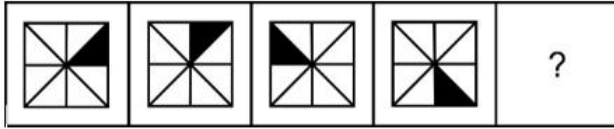
Question Type : MCQ
Question ID : 630680366931
Status : Answered
Chosen Option : 4
Marks : 1

Q.5 Five friends Anubha, Disha, Palak, Prabha, and Prachi live in a five-floored building, each floor having only one apartment. The bottommost floor is numbered as 1 and the floor immediately above it is numbered as 2 and so on. Palak lives on the floor just above Prachi's. Only one person lives between Disha and Prabha. Disha does not live above Prachi. Who lives on the fifth floor?

- Ans
- 1. Prabha
 - 2. Prachi
 - 3. Palak
 - 4. Anubha

Question Type : MCQ
Question ID : 630680366907
Status : Answered
Chosen Option : 3
Marks : 1

Q.6 Select the figure that will replace the question mark (?) in the following figure series.

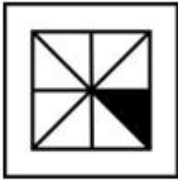


Ans

✓ 1.



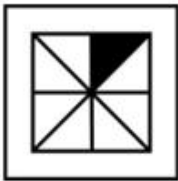
✗ 2.



✗ 3.



✗ 4.



Question Type : MCQ

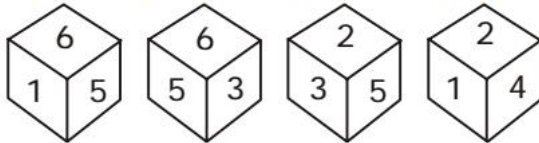
Question ID : 630680366919

Status : Answered

Chosen Option : 1

Marks : 1

Q.7 Four different positions of the same dice are given below. Find the number opposite of 4.



- Ans
- ✗ 1. 1
 - ✗ 2. 3
 - ✓ 3. 5
 - ✗ 4. 6

Question Type : MCQ

Question ID : 630680366921

Status : Answered

Chosen Option : 3

Marks : 1

Q.8 Ramya eats different vegetables namely Radish, Carrot, Turnip, Potato, and Brinjal on five different days of a week from Wednesday to Sunday. She eats Carrots a day before she eats Potato. She eats brinjal two days before she eats Turnip. She eats a Radish on Saturday. On which day does she eat Turnip?

- Ans
- 1. Thursday
 - 2. Sunday
 - 3. Friday
 - 4. Wednesday

Question Type : MCQ
Question ID : 630680366906
Status : Answered
Chosen Option : 2
Marks : 1

Q.9 Two Statements are given followed by two conclusions numbered I and II. Assuming the statements to be true, even if they seem to be at variance with commonly known facts, decide which of the conclusions logically follow(s) from the statements.

Statement I: Some drums are guitars.
Statement II: Some guitars are violins.
Conclusion I: Some drums are violins.
Conclusion II: All violins are guitars.

- Ans
- 1. Only conclusion II follows
 - 2. Both conclusions I and II follow
 - 3. Only conclusion I follows
 - 4. Neither conclusion I nor II follows

Question Type : MCQ
Question ID : 630680366911
Status : Answered
Chosen Option : 4
Marks : 1

Q.10 If A denotes 'addition', B denotes 'multiplication', C denotes 'subtraction', and D denotes 'division', then what will be the value of the following equation?
 $30 A (96 D 12) C 20 = ?$

- Ans
- 1. 22
 - 2. 16
 - 3. 18
 - 4. 14

Question Type : MCQ
Question ID : 630680366927
Status : Answered
Chosen Option : 3
Marks : 1

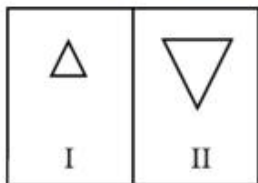
Q.11 Three Statements are given followed by two conclusions numbered I and II. Assuming the statements to be true, even if they seem to be at variance with commonly known facts, decide which of the conclusions logically follow(s) from the statements.

- Statement I: All doctors are nurses.
- Statement II: Some nurses are patients.
- Statement III: No patient is a surgeon.
- Conclusion I: Some surgeons are doctors.
- Conclusion II: Some patients are doctors.

- Ans
- 1. Only conclusion I follows
 - 2. Both conclusions I and II follow
 - 3. Only conclusion II follows
 - 4. Neither conclusion I nor II follows

Question Type : MCQ
 Question ID : 630680366912
 Status : Answered
 Chosen Option : 4
 Marks : 1

Q.12 Choose a pair similar to the pair in the question figure.



Ans

- 1.
- 2.
- 3.
- 4.

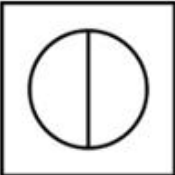


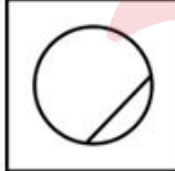
Question Type : MCQ
 Question ID : 630680366925
 Status : Answered
 Chosen Option : 3
 Marks : 1

Q.13 If 'M × N' means 'M is the father of N'.
 If 'M + N' means 'M is the mother of N'.
 If 'M ÷ N' means 'M is the sister of N'.
 If 'M - N' means 'M is the brother of N'.
 How is K related to I in the expression 'K - H + J ÷ I'?

- Ans
- 1. Brother
 - 2. Mother's brother
 - 3. Father
 - 4. Father's brother

Question Type : MCQ
 Question ID : 630680366913
 Status : Answered
 Chosen Option : 2
 Marks : 1

Q.14 Choose the figure which is different from the rest.

- Ans
- 1. 
 - 2. 
 - 3. 
 - 4. 

Question Type : MCQ
 Question ID : 630680366926
 Status : Answered
 Chosen Option : 4
 Marks : 1

Q.15 Select the option that is related to the fifth word in the same way as the fourth word is related to the third word and the second word is related to the first word.
BLUE CITY : JODHPUR :: ORANGE CITY : NAGPUR :: LEATHER CITY : ?

- Ans
- 1. LUCKNOW
 - 2. KANPUR
 - 3. HYDERABAD
 - 4. MADURAI

Question Type : MCQ
Question ID : 630680366916
Status : Answered
Chosen Option : 2
Marks : 1

Q.16 Pointing towards a woman in the photograph, Sashi said, "She is the sister of the son of the only son of my paternal grandmother". How is the woman related to Sashi?

- Ans
- 1. Daughter
 - 2. Mother
 - 3. Sister
 - 4. Wife

Question Type : MCQ
Question ID : 630680366914
Status : Answered
Chosen Option : 3
Marks : 1

Q.17 Evaluate the expression $15.2 \div 4.6$ and round the quotient to three decimal places.

- Ans
- 1. 3.344
 - 2. 3.3
 - 3. 4.344
 - 4. 3.304

Question Type : MCQ
Question ID : 630680366929
Status : Answered
Chosen Option : 4
Marks : 1

Q.18 Four letter-clusters have been given, out of which three are alike in some manner and one is different. Select the odd letter-cluster.

- Ans
- 1. NPR
 - 2. VXZ
 - 3. BDF
 - 4. IKO

Question Type : MCQ
Question ID : 630680366917
Status : Answered
Chosen Option : 4
Marks : 1

Q.19 In a certain code language, if GUAVA is called LITCHI, LITCHI is called MANGO, MANGO is called PINEAPPLE, and PINEAPPLE is called WATERMELON, then which is a seedless fruit?

- Ans
- 1. LITCHI
 - 2. WATERMELON
 - 3. MANGO
 - 4. PINEAPPLE

Question Type : MCQ
Question ID : 630680366908
Status : Answered
Chosen Option : 2
Marks : 1

Q.20 Four word pairs have been given, out of which three are alike in some manner and one is different. Select the odd word pair.

- Ans
- 1. SOUTH KOREA : SEOUL
 - 2. RUSSIA : MOSCOW
 - 3. NEPAL : POKHARA
 - 4. KENYA : NAIROBI

Question Type : MCQ
Question ID : 630680366918
Status : Answered
Chosen Option : 3
Marks : 1

Q.21 In a certain code language, if LETTER is coded as MDUSFQ, MERCY is coded as NDSBZ, then what will FIRE be coded as?

- Ans
- 1. GHSD
 - 2. SHDG
 - 3. HDGS
 - 4. FSFH

Question Type : MCQ
Question ID : 630680366909
Status : Answered
Chosen Option : 1
Marks : 1

Q.22 Which of the following numbers will replace the question mark (?) in the given series?
58, ?, 67, 78, 76, 88, 85

- Ans
- 1. 59
 - 2. 68
 - 3. 62
 - 4. 60

Question Type : MCQ
Question ID : 630680366934
Status : Answered
Chosen Option : 2
Marks : 1

Q.23 Which of the following numbers will replace the question mark (?) in the given series?
1174, 949, ?, 584, 440, 319

- Ans 1. 753
 2. 598
 3. 888
 4. 632

Question Type : MCQ
Question ID : 630680366933
Status : Answered
Chosen Option : 1
Marks : 1

Q.24 Select the option that is related to the third word in the same way as the second word is related to the first word.
FISHERMAN : NET :: CARPENTER : ?

- Ans 1. THERMOMETER
 2. KNIFE
 3. WIRE
 4. HAMMER

Question Type : MCQ
Question ID : 630680366915
Status : Answered
Chosen Option : 4
Marks : 1

Q.25 Six men Mahesh, Nirmal, Abhinav, Parth, Dev, and Roshan sit on a bench facing south. Abhinav sits exactly in between Parth and Mahesh. Five men sit to the left of Mahesh. Roshan sits exactly in between Nirmal and Dev. Who sits second to the left of Parth?

- Ans 1. Mahesh
 2. Dev
 3. Nirmal
 4. Roshan

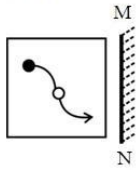
Question Type : MCQ
Question ID : 630680366905
Status : Answered
Chosen Option : 4
Marks : 1

Q.26 Which of the following numbers will replace the question mark (?) in the given series?
16, 17, 25, 52, 116, ?

- Ans 1. 189
 2. 298
 3. 150
 4. 241

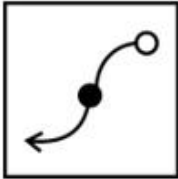
Question Type : MCQ
Question ID : 630680366932
Status : Answered
Chosen Option : 4
Marks : 1

Q.27 Select the correct mirror image of the given figure when the mirror MN is placed to the right side of the figure.

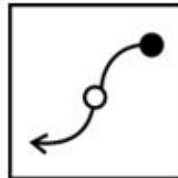


Ans

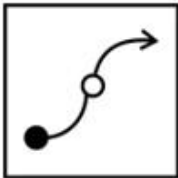
✗ 1.



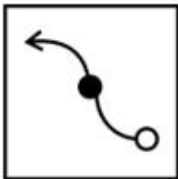
✓ 2.



✗ 3.



✗ 4.



Question Type : MCQ

Question ID : 630680366922

Status : Answered

Chosen Option : 2

Marks : 1

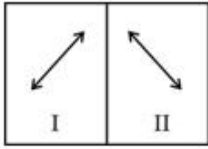
Q.28 Choose the figure pair which is different from the rest.

Ans

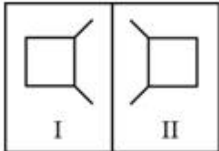
✓ 1.



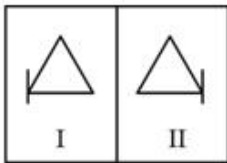
✗ 2.



✗ 3.



✗ 4.



Question Type : MCQ

Question ID : 630680366924

Status : Answered

Chosen Option : 1

Marks : 1

Q.29 Subtract 71.344 from 156.918 and round the result to two decimal places.

Ans ✗ 1. 85.574

✗ 2. 85.56

✓ 3. 85.57

✗ 4. 85.58

Question Type : MCQ

Question ID : 630680366930

Status : Answered

Chosen Option : 3

Marks : 1

Q.30 In a certain code language 'Sita is girl' means '486', 'Ram loves Sita' means '278' and 'Ram is God' means '475'. What is the code for 'God'?

Ans ✓ 1. 5

✗ 2. 2

✗ 3. 7

✗ 4. 4

Question Type : MCQ

Question ID : 630680366910

Status : Answered

Chosen Option : 1

Marks : 1

Section : General Awareness

Q.1 Who was the founder of Tattvabodhini Sabha?

- Ans
- 1. Atmaram Pandurang
 - 2. Raja Rammohan Roy
 - 3. Debendranath Tagore
 - 4. Keshab Chandra Sen

Question Type : MCQ
Question ID : 630680366942
Status : Answered
Chosen Option : 3
Marks : 1

Q.2 How many inscriptions have been found in the Jataka tales?

- Ans
- 1. 100
 - 2. 5
 - 3. 20
 - 4. 82

Question Type : MCQ
Question ID : 630680366960
Status : Not Answered
Chosen Option : --
Marks : 0

Q.3 Which of the following governments of India has recently introduced a groundbreaking scheme named Mo Jungle Jami Yojana, aimed at bolstering forest rights among tribal communities and forest dwellers across the state?

- Ans
- 1. Karnataka
 - 2. Nagaland
 - 3. Kerala
 - 4. Odisha

Question Type : MCQ
Question ID : 630680366939
Status : Not Answered
Chosen Option : --
Marks : 0

Q.4 Read the following statements about infrastructure:

A. Infrastructure provides supporting services in the main areas of industrial and agricultural production, domestic and foreign trade and commerce.

B. These services include roads, railways, ports, airports, dams, power stations, oil and gas pipelines, telecommunication facilities, the country's educational system including schools and colleges, health system including hospitals, sanitary system including clean drinking water facilities and the monetary system including banks, insurance and other financial institutions.

Identify the CORRECT statement/statements.

- Ans
- 1. Neither A nor B
 - 2. Only B
 - 3. Only A
 - 4. Both A and B

Question Type : MCQ
Question ID : 630680366958
Status : Answered
Chosen Option : 2
Marks : - 1/4

Q.5 Which of the following relations correctly represents Assets?

- Ans
- 1. Assets= Reserves/Loans
 - 2. Assets= Reserves-Loans
 - 3. Assets= Reserves+Loans
 - 4. Assets= Reserves

Question Type : MCQ
Question ID : 630680366952
Status : Not Answered
Chosen Option : --
Marks : 0

Q.6 Which of the following rivers of India is NOT a tributary of Indus?

- Ans
- 1. Jhelum
 - 2. Son
 - 3. Ravi
 - 4. Beas

Question Type : MCQ
Question ID : 630680366955
Status : Answered
Chosen Option : 2
Marks : 1

Q.7 Which of the following is the main source of employment for majority of workers?

- Ans
- 1. Service sector
 - 2. Secondary sector
 - 3. Primary sector
 - 4. Service sector and Secondary sector

Question Type : MCQ
Question ID : 630680366950
Status : Answered
Chosen Option : 4
Marks : - 1/4

Q.8 Which of the following cities received the prestigious World Green City Award 2022?

- Ans
- 1. Mumbai
 - 2. Hyderabad
 - 3. Kolkata
 - 4. Goa

Question Type : MCQ
Question ID : 630680366935
Status : Answered
Chosen Option : 2
Marks : 1

Q.9 Which of the following is India's rank in the 2021 Human Development Index?

- Ans
- 1. 1
 - 2. 55
 - 3. 10
 - 4. 132

Question Type : MCQ
Question ID : 630680366948
Status : Answered
Chosen Option : 4
Marks : 1

Q.10 Which of the following state governments has launched an ambitious project to improve the green cover of over 3,000 temples being managed by five Devaswom Boards?

- Ans
- 1. Kerala
 - 2. Maharashtra
 - 3. Karnataka
 - 4. Assam

Question Type : MCQ
Question ID : 630680366936
Status : Not Answered
Chosen Option : --
Marks : 0

Q.11 In which of the following states is Chhadi festival held?

- Ans
- 1. Andhra Pradesh
 - 2. Rajasthan
 - 3. Gujarat
 - 4. Assam

Question Type : MCQ
Question ID : 630680366964
Status : Not Answered
Chosen Option : --
Marks : 0

Q.12 Which of the following companies launched the first satellite-based two-way messaging?

- Ans
- 1. Meta
 - 2. Qualcomm
 - 3. Google
 - 4. Microsoft

Question Type : MCQ
Question ID : 630680366937
Status : Not Answered
Chosen Option : --
Marks : 0

Q.13 Which of the following Mughal rulers crossed the Amu Darya and captured Kabul from the last of its Mongol rulers in 1504?

- Ans
- 1. Aurangzeb
 - 2. Akbar
 - 3. Shah Jahan
 - 4. Babur

Question Type : MCQ
Question ID : 630680366944
Status : Answered
Chosen Option : 4
Marks : 1

Q.14 Which of the following is the largest container port in India?

- Ans
- 1. Mumbai Port
 - 2. New Mangalore Port
 - 3. Jawaharlal Nehru Port
 - 4. Marmagao Port

Question Type : MCQ
Question ID : 630680366959
Status : Answered
Chosen Option : 3
Marks : 1

Q.15 In which of the following states is Thrisuur Pooram held?

- Ans 1. Madhya Pradesh
 2. Karnataka
 3. Manipur
 4. Kerala

Question Type : MCQ
Question ID : 630680366963
Status : Answered
Chosen Option : 4
Marks : 1

Q.16 Which of the following is the longest ranges in India?

- Ans 1. Mahabharat
 2. Pir Panjal
 3. Dhaula Dhar
 4. Barail

Question Type : MCQ
Question ID : 630680366954
Status : Answered
Chosen Option : 2
Marks : 1

Q.17 Which of the following governments unveiled two groundbreaking initiatives aimed at leveraging the power of Artificial Intelligence (AI) in the state?

- Ans 1. Odisha
 2. Assam
 3. Kerala
 4. Tripura

Question Type : MCQ
Question ID : 630680366938
Status : Not Answered
Chosen Option : --
Marks : 0

Q.18 Kikkli is a folk dance of which of the following states of India?

- Ans 1. Nagaland
 2. Odisha
 3. Mizoram
 4. Punjab

Question Type : MCQ
Question ID : 630680366961
Status : Not Answered
Chosen Option : --
Marks : 0

Q.19 Which of the following types of banks offers personalized banking services?

- Ans 1. Investment Banks
 2. Private Banks
 3. Neobanks
 4. Commercial Banks

Question Type : MCQ
Question ID : 630680366947
Status : Not Answered
Chosen Option : --
Marks : 0

Q.20 Which of the following is the rank of India in the recent Global Quality Infrastructure Index (GQII) 2021?

- Ans 1. 1st
 2. 5th
 3. 100th
 4. 10th

Question Type : MCQ
Question ID : 630680366949
Status : Not Answered
Chosen Option : --
Marks : 0

Q.21 Which of the following classical dances is a principal dance of North India?

- Ans 1. Kathak
 2. Manipuri Dance
 3. Odissi
 4. Bharatanatyam

Question Type : MCQ
Question ID : 630680366962
Status : Answered
Chosen Option : 1
Marks : 1

Q.22 Which of the following is the range of rainfall in Thorn forests?

- Ans 1. Less than 70 cm
 2. Greater than 100 cm
 3. More than 70 cm
 4. More than 150 cm

Question Type : MCQ
Question ID : 630680366956
Status : Not Answered
Chosen Option : --
Marks : 0

Q.23 Which of the following metro cities is the least populated as per Census 2011?

- Ans
- 1. Mumbai
 - 2. Chennai
 - 3. Delhi
 - 4. Bangalore

Question Type : MCQ
Question ID : 630680366957
Status : Answered
Chosen Option : 4
Marks : 1

Q.24 Which of the following renowned Indian writers was also known as Mahakavi Bharatiyar?

- Ans
- 1. Surendra Nath Banerjee
 - 2. Bankim Chandra Chatterjee
 - 3. Subramania Bharati
 - 4. Dadabhai Naoroji

Question Type : MCQ
Question ID : 630680366941
Status : Not Answered
Chosen Option : --
Marks : 0

Q.25 Which of the following is the recently launched airport in the state of Karnataka?

- Ans
- 1. Netaji Subhash Chandra Bose International Airport
 - 2. Kempegowda airport
 - 3. Indira Gandhi International Airport
 - 4. Shivmogga airport

Question Type : MCQ
Question ID : 630680366940
Status : Answered
Chosen Option : 2
Marks : - 1/4

Q.26 During whose reign did Hieun Tsang visit Kashmir?

- Ans
- 1. Durlabhavardhana
 - 2. Nazuk Shah
 - 3. Kanishka
 - 4. Ibrahim Shah

Question Type : MCQ
Question ID : 630680366945
Status : Answered
Chosen Option : 1
Marks : 1

Q.27 Which of the following dynasties of South India were also known as Solankis?

- Ans 1. Chalukyas
 2. Cholas
 3. Kadambas
 4. Pandyas

Question Type : MCQ
Question ID : 630680366943
Status : Answered
Chosen Option : 1
Marks : 1

Q.28 Which of the following relations correctly represents Personal Disposable Income?

- Ans 1. Personal Disposable Income (PDI) \equiv Personal Income + Personal tax payments - Non-tax payments
 2. Personal Disposable Income (PDI) \equiv Personal Income - Personal tax payments + Non-tax payments
 3. Personal Disposable Income (PDI) \equiv Personal Income / Personal tax payments - Non-tax payments
 4. Personal Disposable Income (PDI) \equiv Personal Income - Personal tax payments - Non-tax payments

Question Type : MCQ
Question ID : 630680366953
Status : Answered
Chosen Option : 4
Marks : 1

Q.29 Which of the following kings was the first in India to introduce Paternal Kinship?

- Ans 1. Chandragupta Maurya
 2. Brihadratha
 3. Ashoka
 4. Bindusara

Question Type : MCQ
Question ID : 630680366946
Status : Answered
Chosen Option : 2
Marks : - 1/4

Q.30 Which of the following banks inspired the creation of Regional Rural Banks (RRBs) in India?

- Ans 1. Assam Gramin Vikas Bank
 2. Bank of Baroda
 3. Central Bank of India
 4. Grameen Model Bank

Question Type : MCQ
Question ID : 630680366951
Status : Not Answered
Chosen Option : --
Marks : 0

Section : Quantitative Aptitude

Q.1

What is the value of $\frac{(48 + 16) \div 8 \text{ of } 2 + (81 \div 9 + 21 \times 41)}{(85 + 34) \text{ of } 35 \div (3 \times 4 + 28 - 23)}$?

Ans

1. $\frac{874}{243}$

2. $\frac{874}{245}$

3. $\frac{876}{245}$

4. $\frac{876}{243}$

Question Type : MCQ

Question ID : 630680366967

Status : Answered

Chosen Option : 2

Marks : 1

Q.2 If 18 is subtracted from 27 percent of a number, then the result is 144. What is the value of the number?

Ans

1. 660

2. 600

3. 66

4. 60

Question Type : MCQ

Question ID : 630680366971

Status : Answered

Chosen Option : 2

Marks : 1

Q.3 Selling price of an article is Rs. 646. If loss percentage is 32 percent, then what is the cost price of article?

Ans

1. Rs. 980

2. Rs. 1000

3. Rs. 950

4. Rs. 820

Question Type : MCQ

Question ID : 630680366973

Status : Answered

Chosen Option : 3

Marks : 1

Q.4 If $(6a + 2b) : (6a - 2b) = 6 : 5$, then what is the value of $a : b$?

- Ans
- 1. 15 : 2
 - 2. 13 : 2
 - 3. 11 : 3
 - 4. 1 : 1

Question Type : MCQ
 Question ID : 630680366976
 Status : Answered
 Chosen Option : 3
 Marks : 1

Q.5 If the side of a regular hexagon is 12 cm, then what is the length of the largest diagonal of the regular hexagon?

- Ans
- 1. 18
 - 2. 24
 - 3. 12
 - 4. 16

Question Type : MCQ
 Question ID : 630680366992
 Status : Answered
 Chosen Option : 2
 Marks : 1

Q.6 The present population of a town is 57600. It increases every year at the rate of 20 percent. What was the population of the town 2 years ago?

- Ans
- 1. 46080
 - 2. 48000
 - 3. 40000
 - 4. 38000

Question Type : MCQ
 Question ID : 630680366972
 Status : Answered
 Chosen Option : 3
 Marks : 1

Q.7 A circus tent is cylindrical up to a height of 12 metres and conical above it. Its radius is 40 metres and the slant height of the cone at the top is 60 metres. What will be the total surface area of the cloth required to make the tent?

- Ans
- 1. $1590 \pi \text{ metre}^2$
 - 2. $2780 \pi \text{ metre}^2$
 - 3. $4572 \pi \text{ metre}^2$
 - 4. $3360 \pi \text{ metre}^2$

Question Type : MCQ
 Question ID : 630680366990
 Status : Not Answered
 Chosen Option : --
 Marks : 0

Q.8 What is the value of $\left(\frac{44}{96} \text{ of } \frac{24}{13} \div \frac{11}{78}\right) - \left(\frac{48}{56} \div \frac{8}{7} \times \frac{128}{16}\right)$?

- Ans
- 1. 18
 - 2. 0
 - 3. 20
 - 4. 12

Question Type : MCQ
Question ID : 630680366966
Status : Answered
Chosen Option : 2
Marks : 1

Q.9 The Least Common Multiple of three different numbers is 160. Which of the following cannot be their Highest Common Factor?

- Ans
- 1. 10
 - 2. 12
 - 3. 40
 - 4. 20

Question Type : MCQ
Question ID : 630680366965
Status : Answered
Chosen Option : 2
Marks : 1

Q.10 Rs. 20000 is lent at compound interest at an annual rate of 12 percent per annum for 1 year (compounding annually). If the compounding of interest is done half yearly, then how much more interest will be obtained?

- Ans
- 1. Rs. 108
 - 2. Rs. 72
 - 3. Rs. 98
 - 4. Rs. 110

Question Type : MCQ
Question ID : 630680366982
Status : Answered
Chosen Option : 2
Marks : 1

Q.11 A company retains 60 percent of its total profit and divides rest of the profit among its 20 employees. The ratio of the number of senior employees to the number of junior employees is 2 : 3. The profit share of each senior employee and each junior employee are in the ratio of 5 : 2 respectively. If each junior employee gets Rs. 2600 as his share of profit, then what is the total profit of the company?

- Ans
- 1. Rs. 208000
 - 2. Rs. 218000
 - 3. Rs. 188000
 - 4. Rs. 280000

Question Type : MCQ
Question ID : 630680366978
Status : Answered
Chosen Option : 1
Marks : 1

Q.12 The simple interest received on a sum is $\frac{16}{25}$ of the sum. The number of years is equal to the annual rate of interest. What is the annual rate of interest?

- Ans
- 1. 8 percent
 - 2. 12.5 percent
 - 3. 9 percent
 - 4. 10 percent

Question Type : MCQ
Question ID : 630680366980
Status : Answered
Chosen Option : 1
Marks : 1

Q.13 If the ratio of the volumes of two cylinders is 5 : 4 and the ratio of their heights is 9 : 20, then what is the ratio of their radii?

- Ans
- 1. 4 : 3
 - 2. 9 : 20
 - 3. 5 : 4
 - 4. 5 : 3

Question Type : MCQ
Question ID : 630680366989
Status : Answered
Chosen Option : 4
Marks : 1

Q.14 If Rs. 10000 becomes Rs. 14400 in 2 years at compound interest (compounded annually), then what is the annual rate of interest?

- Ans
- 1. 25 percent
 - 2. 30 percent
 - 3. 20 percent
 - 4. 44 percent

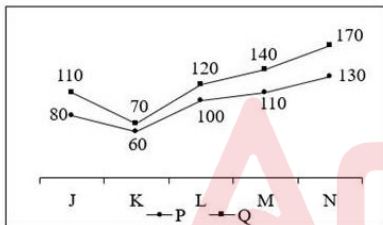
Question Type : MCQ
 Question ID : 630680366981
 Status : Answered
 Chosen Option : 3
 Marks : 1

Q.15 The speed of a bus is 36 km/hr. What will be the distance covered by the bus in 30 seconds?

- Ans
- 1. 300 metres
 - 2. 420 metres
 - 3. 350 metres
 - 4. 380 metres

Question Type : MCQ
 Question ID : 630680366983
 Status : Answered
 Chosen Option : 1
 Marks : 1

Q.16 The line chart given below shows the number of taxi sold by two companies.



What are the ratio of total number of taxi J, K and L sold by P to the total number of taxi L, M and N sold by Q?

- Ans
- 1. 30 : 49
 - 2. 24 : 43
 - 3. 31 : 47
 - 4. 49 : 30

Question Type : MCQ
 Question ID : 630680366987
 Status : Answered
 Chosen Option : 2
 Marks : 1

Q.17 Radius of a circle is 18 cm. Angle made by chord AB at the centre of this circle is 90 degree.
What is the length of this chord?

- Ans
- 1. 36 cm
 - 2. $18\sqrt{3}$ cm
 - 3. 27 cm
 - 4. $18\sqrt{2}$ cm

Question Type : MCQ
Question ID : 630680366991
Status : Answered
Chosen Option : 1
Marks : - 1/4

Q.18 Tom's father is 5 times as old as Tom. After 6 years, father will be three times as old as Tom.
Find present age of Tom's father.

- Ans
- 1. 28
 - 2. 30
 - 3. 42
 - 4. 36

Question Type : MCQ
Question ID : 630680366988
Status : Answered
Chosen Option : 2
Marks : 1

Q.19 After two successive discounts of 30 percent and 10 percent an article is sold for Rs. 1260.
What is the marked price of the article?

- Ans
- 1. Rs. 2000
 - 2. Rs. 2400
 - 3. Rs. 2500
 - 4. Rs. 2200

Question Type : MCQ
Question ID : 630680366975
Status : Answered
Chosen Option : 1
Marks : 1

Q.20 Anil alone can do a work in 30 hours. Anil and Rahul together can do the same work in 20 hours. Rahul and Tarun together can do the same work in 10 hours. In how many hours can Tarun alone do the same work?

- Ans
- 1. 11 hours
 - 2. 15 hours
 - 3. 12.5 hours
 - 4. 12 hours

Question Type : MCQ
Question ID : 630680366985
Status : Answered
Chosen Option : 4
Marks : 1

Q.21 Two people K and L are at a distance of 150 km from each other at 8 AM. After 30 minutes, K starts moving towards L at a speed of 24 km/hr while at 1 PM L starts moving away from K at a speed of 18 km/hr. At what time will they meet on the next day?

- Ans
- 1. 5:00 pm
 - 2. 4:00 pm
 - 3. 2:00 pm
 - 4. 3:00 pm

Question Type : MCQ
Question ID : 630680366984
Status : Answered
Chosen Option : 3
Marks : 1

Q.22 The average age of 7 members of a family is 32 years. If the youngest member is 6 years old, then what was the average age of the family just before the birth of the youngest member?

- Ans
- 1. 30.33 years
 - 2. 31.68 years
 - 3. 33.72 years
 - 4. 32.23 years

Question Type : MCQ
Question ID : 630680366969
Status : Answered
Chosen Option : 1
Marks : 1

Q.23 The average of 89, 64, 51, 69 and R is 79. What is the value of R?

- Ans
- 1. 122
 - 2. 128
 - 3. 118
 - 4. 115

Question Type : MCQ
Question ID : 630680366968
Status : Answered
Chosen Option : 1
Marks : 1

Q.24 The cost price of 80 articles is same as the selling price of x articles. If there is a profit of 14.28 percent, then what is the value (approx.) of x ?

- Ans
- 1. 70
 - 2. 75
 - 3. 60
 - 4. 90

Question Type : MCQ
Question ID : 630680366974
Status : Answered
Chosen Option : 1
Marks : 1

Q.25 What will be the median of the numbers 8, 5, 7, 10, 15 and 21?

- Ans
- 1. 11
 - 2. 9
 - 3. 10
 - 4. 7

Question Type : MCQ
Question ID : 630680366986
Status : Answered
Chosen Option : 1
Marks : - 1/4

Q.26 Simple interest on a sum for 18 months at the rate of 8 percent per annum is Rs. 1152. What is the sum?

- Ans
- 1. Rs. 6000
 - 2. Rs. 9600
 - 3. Rs. 4800
 - 4. Rs. 7200

Question Type : MCQ
Question ID : 630680366979
Status : Answered
Chosen Option : 2
Marks : 1

Q.27 In a cyclic quadrilateral MNOP, $\angle M$ is opposite to $\angle O$. If $3\angle O = 2\angle M$, then what is the value of $\angle O$?

- Ans
- 1. 90 degree
 - 2. 108 degree
 - 3. 72 degree
 - 4. 60 degree

Question Type : MCQ
Question ID : 630680366993
Status : Answered
Chosen Option : 3
Marks : 1

Q.28 In a mixture of 140 litre the ratio of water and milk is 9 : 5 respectively. How much water must be added to make the ratio of water and milk as 23 : 10 respectively?

- Ans
- 1. 30 litre
 - 2. 15 litre
 - 3. 25 litre
 - 4. 35 litre

Question Type : MCQ
Question ID : 630680366977
Status : Answered
Chosen Option : 3
Marks : 1

Q.29 If $\sin A = \frac{3}{5}$, then what is the value of $(\cos A + \cot A)$?

- Ans
- 1. $\frac{37}{15}$
 - 2. $\frac{11}{5}$
 - 3. $\frac{34}{15}$
 - 4. $\frac{32}{15}$

Question Type : MCQ
Question ID : 630680366994
Status : Answered
Chosen Option : 4
Marks : 1

Q.30 There is group of 11 Doctors. One Doctor leaves the group and a new Doctor joins the group. Due to this, the average age of Doctors become equal to the average age 2 year ago. If the age of Doctor who left the group was 60 years, then what is the age of new Doctor?

- Ans
- 1. 41 years
 - 2. 38 years
 - 3. 37 years
 - 4. 40 years

Question Type : MCQ
Question ID : 630680366970
Status : Answered
Chosen Option : 2
Marks : 1

Q.1 Read the passage carefully and select the correct answer for the given blanks out of the four alternatives.

Many birds, including birds of prey, gulls and pigeons, are urban-adapted and breed (1) _____ in cityscapes where human-made materials are readily available. The (2) _____ to which birds adapt to polluted environments remains underappreciated because a study like ours is only as good as the (3) _____ data. We encourage researchers to collect data from nests of many (4) _____ species, but to do so in a standardised way to allow for sound comparisons between studies and species.

Select the most appropriate option for blank (2)

- Ans
- 1. capacity
 - 2. extent
 - 3. area
 - 4. access

Question Type : MCQ
Question ID : 630680367002
Status : Answered
Chosen Option : 1
Marks : - 1/4

Q.2 Read the passage carefully and select the correct answer for the given blanks out of the four alternatives.

Many birds, including birds of prey, gulls and pigeons, are urban-adapted and breed (1) _____ in cityscapes where human-made materials are readily available. The (2) _____ to which birds adapt to polluted environments remains underappreciated because a study like ours is only as good as the (3) _____ data. We encourage researchers to collect data from nests of many (4) _____ species, but to do so in a standardised way to allow for sound comparisons between studies and species.

Select the most appropriate option for blank (3)

- Ans
- 1. Available
 - 2. concord
 - 3. trapped
 - 4. promiscuous

Question Type : MCQ
Question ID : 630680367003
Status : Answered
Chosen Option : 1
Marks : 1

Q.3 Choose the sentence with no spelling errors.

- Ans
- 1. The golden age of sceince fiction film had run its course.
 - 2. The golden age of science fiction film had run its courrse.
 - 3. The glden age of science fiction film had run its course.
 - 4. The golden age of science fiction film had run its course.

Question Type : MCQ
Question ID : 630680367018
Status : Answered
Chosen Option : 4
Marks : 1

Q.4 Choose the word that can substitute the given group of words.

That which is pig like

- Ans
- 1. Porch
 - 2. Feline
 - 3. Porcine
 - 4. Sanguine

Question Type : MCQ
Question ID : 630680366995
Status : Answered
Chosen Option : 3
Marks : 1

Q.5 Choose the INCORRECTLY spelt word.

- Ans
- 1. Barbaruous
 - 2. Methodical
 - 3. Sickness
 - 4. Liability

Question Type : MCQ
Question ID : 630680367017
Status : Answered
Chosen Option : 1
Marks : 1

Q.6 In the following question, out of the given four alternatives, select the alternative which best expresses the meaning of the Idiom/Phrase.

A bunch of fives

- Ans
- 1. A fist or punch
 - 2. A horde of savages
 - 3. To give someone a high-five
 - 4. A group of young girls

Question Type : MCQ
Question ID : 630680367009
Status : Answered
Chosen Option : 2
Marks : - 1/4

Q.7 Rearrange the parts of the sentence in correct order.

The Southeast Asian country,
P. seeking to boost output from existing cultivated areas
Q. the world's top palm oil producer, launched the
R. moratorium in September 2018 to try to stop deforestation
S. and improve governance in the industry, while

- Ans
- 1. SPQR
 - 2. QRSP
 - 3. RSPQ
 - 4. QPRS

Question Type : MCQ
Question ID : 630680366999
Status : Answered
Chosen Option : 2
Marks : 1

Q.8 A sentence has been given with a blank to be filled with an appropriate option. Choose the correct alternative.

I can take care of _____ son.

- Ans
- 1. yours'
 - 2. you
 - 3. your
 - 4. yours

Question Type : MCQ
Question ID : 630680367005
Status : Answered
Chosen Option : 3
Marks : 1

Q.9 Choose the word that means the opposite of the underlined word.

Such a society needs to subjugate others, to establish some visible superiority.

- Ans
- 1. Emancipate
 - 2. Quell
 - 3. Crush
 - 4. Vanquish

Question Type : MCQ
Question ID : 630680367015
Status : Answered
Chosen Option : 3
Marks : - 1/4

Q.10 Choose the word that is opposite in meaning to the given word.

Malevolent

- Ans
- 1. Indurate
 - 2. Hostile
 - 3. Benign
 - 4. Pernicious

Question Type : MCQ
Question ID : 630680367012
Status : Not Answered
Chosen Option : --
Marks : 0

Q.11 Improve the underlined part of the sentence. Choose 'No improvement' as an answer if the sentence is grammatically correct.

Make sure to put on the parking brake when you parked your car.

- Ans
- 1. park your
 - 2. parking your
 - 3. No improvement
 - 4. parks your

Question Type : MCQ
Question ID : 630680366997
Status : Answered
Chosen Option : 1
Marks : 1

Q.12 Choose the appropriate idiom alternative for the underlined segment.

I always knew that you would face this situation bravely.

- Ans
- 1. bite the bullet
 - 2. hit the nail on the head
 - 3. break a leg
 - 4. go out the window

Question Type : MCQ
Question ID : 630680367011
Status : Answered
Chosen Option : 1
Marks : 1

Q.13 Read the passage carefully and select the correct answer for the given blanks out of the four alternatives.

Many birds, including birds of prey, gulls and pigeons, are urban-adapted and breed (1) _____ in cityscapes where human-made materials are readily available. The (2) _____ to which birds adapt to polluted environments remains underappreciated because a study like ours is only as good as the (3) _____ data. We encourage researchers to collect data from nests of many (4) _____ species, but to do so in a standardised way to allow for sound comparisons between studies and species.

Select the most appropriate option for blank (1)

- Ans
- 1. painfully
 - 2. gradually
 - 3. banefully
 - 4. successfully

Question Type : MCQ
Question ID : 630680367001
Status : Answered
Chosen Option : 2
Marks : - 1/4

Q.14 Choose the appropriate idiom alternative for the underlined segment.

I didn't mean to spoil you plan, but my relatives showed up suddenly.

- Ans
- 1. rain on your parade
 - 2. go bananas
 - 3. bury the hatchet
 - 4. give a tall order

Question Type : MCQ
Question ID : 630680367010
Status : Answered
Chosen Option : 1
Marks : 1

Q.15 Choose the word that means the same as the underlined word.

The crucible was surrounded with a bad conductor of heat to minimize loss by radiation.

- Ans
- 1. Unbound
 - 2. Stripped
 - 3. Encompassed
 - 4. Barred

Question Type : MCQ
Question ID : 630680367014
Status : Answered
Chosen Option : 3
Marks : 1

Q.16 A sentence has been given with a blank to be filled with an appropriate option. Choose the correct alternative.

Will you have _____ tea? he added.

- Ans
- 1. little
 - 2. few
 - 3. some
 - 4. any

Question Type : MCQ
Question ID : 630680367006
Status : Answered
Chosen Option : 3
Marks : 1

Q.17 Rearrange the parts of the sentence in correct order.

The earlier people
P. such as exercising more and cutting back on alcohol
Q. the sooner they can make simple lifestyle changes
R. that can slow the progress of the disease
S. know they are at risk of developing Alzheimer's

- Ans
- 1. RSQP
 - 2. SQPR
 - 3. QPSR
 - 4. QPRS

Question Type : MCQ
Question ID : 630680367000
Status : Answered
Chosen Option : 2
Marks : 1

Q.18 Choose the sentence with no spelling errors.

- Ans
- 1. These dynamics have far-reaching implications in the world of marketting.
 - 2. These dynamics have far-reaching implications in the world of marketing.
 - 3. These dymimcs have far-reaching implications in the world of marketing.
 - 4. These dynamics have far-reaching implicatons in the world of marketing.

Question Type : MCQ
Question ID : 630680367019
Status : Answered
Chosen Option : 2
Marks : 1

Q.19 Choose the word that can substitute the given group of words.

A head of family

- Ans
- 1. Mother
 - 2. Genus
 - 3. Genearch
 - 4. Father

Question Type : MCQ
Question ID : 630680366996
Status : Answered
Chosen Option : 2
Marks : - 1/4

Q.20 Read the passage carefully and select the correct answer for the given blanks out of the four alternatives.

Many birds, including birds of prey, gulls and pigeons, are urban-adapted and breed (1) _____ in cityscapes where human-made materials are readily available. The (2) _____ to which birds adapt to polluted environments remains underappreciated because a study like ours is only as good as the (3) _____ data. We encourage researchers to collect data from nests of many (4) _____ species, but to do so in a standardised way to allow for sound comparisons between studies and species.

Select the most appropriate option for blank (4)

- Ans
- 1. more
 - 2. much
 - 3. type
 - 4. so

Question Type : MCQ
Question ID : 630680367004
Status : Answered
Chosen Option : 1
Marks : 1

Q.21 Choose the INCORRECTLY spelt word.

- Ans
- 1. Organisation
 - 2. Tenaciuos
 - 3. Cabbage
 - 4. Mandatory

Question Type : MCQ
Question ID : 630680367016
Status : Answered
Chosen Option : 2
Marks : 1

Q.22 A sentence has been given with a blank to be filled with an appropriate option. Choose the correct alternative.

Alcohol should be avoided as much _____ possible.

- Ans
- 1. if
 - 2. as
 - 3. though
 - 4. so

Question Type : MCQ
Question ID : 630680367007
Status : Answered
Chosen Option : 2
Marks : 1

Q.23 Improve the underlined part of the sentence. Choose "No improvement" as an answer if the sentence is grammatically correct.

I have published a set of guiding principles that specifies what rewilding should involve and how it should be done.

- Ans
- 1. which specify what rewilding should involve
 - 2. which specifies what rewilding shall involve
 - 3. that specify what rewilding is involving
 - 4. No improvement

Question Type : MCQ
Question ID : 630680366998
Status : Answered
Chosen Option : 1
Marks : 1

Q.24 In the following question, out of the given four alternatives, select the alternative which best expresses the meaning of the Idiom/Phrase.

To get the axe

- Ans
- 1. To jump into conclusions
 - 2. To be fired from a job
 - 3. To get hurt badly
 - 4. To be in the path of danger

Question Type : MCQ
Question ID : 630680367008
Status : Answered
Chosen Option : 4
Marks : - 1/4

Q.25 Choose the word that means the same as the given word.

Sartorial

- Ans
- 1. Sarcastic
 - 2. Petty
 - 3. Mend
 - 4. Tailored

Question Type : MCQ
Question ID : 630680367013
Status : Not Answered
Chosen Option : --
Marks : 0

Comprehension:

Read the following information carefully and answer the given questions.

Chocolate is made from cocoa beans that grow on cacao trees, originally native to Central America and now grown in tropical climates throughout the world. A single cacao tree produces 20 to 30 cocoa pods per year, and each pod contains around 40 cocoa beans. It takes one year's yield from a single tree to produce about five dark chocolate bars.

Cocoa pods mature on the vine and are hand-harvested, then cut open to dry. The cocoa beans, covered in a white pulp, are laid out in the sun to ferment, and the chocolate flavor starts to emerge. Different types of fermentation processes result in different flavors of chocolate. The dried beans are then cracked open, the shells are removed, and the remaining cocoa nibs are roasted.

The roasting process also affects the flavor of the cocoa nibs. Roasted nibs are ground into a liquid called cocoa liquor, which is free of alcohol and contains 50 to 60 percent cocoa butter. From there the cocoa liquor can be further refined into cocoa powder, or other ingredients like sugar, vanilla, nuts, fruits, or milk can be added to the cocoa liquor to make chocolate bars.

Dark chocolate contains 60 percent or more cocoa, and no milk. Milk chocolate only contains 5 to 7 percent cocoa, and white chocolate doesn't contain any cocoa at all—just cocoa butter and milk. As with berries and leafy greens, the darker the color of the chocolate, the more antioxidant properties it contains and the better it is for you. Also, milk binds to the antioxidants eliminating their ability to fight free radicals, so eating milk chocolate or drinking milk with dark chocolate has few to no health benefits.

Chocolate has been used for its healing properties for more than 3,000 years, and dates back to the early Mayans. Now researchers are finding scientific evidence for those healing properties.

Dark chocolate contains polyphenols, a powerful type of antioxidant that is also found in foods like berries, green and black tea, and red wine. These polyphenols help to defend the body's cells against free radicals from environmental toxins and diseases, including heart disease, cancer, and chronic inflammation. In fact, one study by Yale University Prevention Research Center indicated that chocolate contains more phenolic antioxidants than any other food.

Studies done at the University of Southern California, the Institute of Cardiology in Russia, and the University of Guadalajara, Mexico, showed that consumption of dark chocolate helps improve blood flow, lower blood pressure, lowers LDL blood cholesterol (bad cholesterol), increases HDL cholesterol (good cholesterol), improves vascular function, and reduces the risk of stroke.

SubQuestion No : 26

Q.26 What is the antonym of the word "fermentation" as used in the passage?

- Ans
- 1. Tranquillity
 - 2. Decrement
 - 3. Trepid
 - 4. Stagnant

Question Type : MCQ
Question ID : 630680367025
Status : Answered
Chosen Option : 4
Marks : - 1/4

Comprehension:

Read the following information carefully and answer the given questions.

Chocolate is made from cocoa beans that grow on cacao trees, originally native to Central America and now grown in tropical climates throughout the world. A single cacao tree produces 20 to 30 cocoa pods per year, and each pod contains around 40 cocoa beans. It takes one year's yield from a single tree to produce about five dark chocolate bars.

Cocoa pods mature on the vine and are hand-harvested, then cut open to dry. The cocoa beans, covered in a white pulp, are laid out in the sun to ferment, and the chocolate flavor starts to emerge. Different types of fermentation processes result in different flavors of chocolate. The dried beans are then cracked open, the shells are removed, and the remaining cocoa nibs are roasted.

The roasting process also affects the flavor of the cocoa nibs. Roasted nibs are ground into a liquid called cocoa liquor, which is free of alcohol and contains 50 to 60 percent cocoa butter. From there the cocoa liquor can be further refined into cocoa powder, or other ingredients like sugar, vanilla, nuts, fruits, or milk can be added to the cocoa liquor to make chocolate bars.

Dark chocolate contains 60 percent or more cocoa, and no milk. Milk chocolate only contains 5 to 7 percent cocoa, and white chocolate doesn't contain any cocoa at all—just cocoa butter and milk. As with berries and leafy greens, the darker the color of the chocolate, the more antioxidant properties it contains and the better it is for you. Also, milk binds to the antioxidants eliminating their ability to fight free radicals, so eating milk chocolate or drinking milk with dark chocolate has few to no health benefits.

Chocolate has been used for its healing properties for more than 3,000 years, and dates back to the early Mayans. Now researchers are finding scientific evidence for those healing properties.

Dark chocolate contains polyphenols, a powerful type of antioxidant that is also found in foods like berries, green and black tea, and red wine. These polyphenols help to defend the body's cells against free radicals from environmental toxins and diseases, including heart disease, cancer, and chronic inflammation. In fact, one study by Yale University Prevention Research Center indicated that chocolate contains more phenolic antioxidants than any other food.

Studies done at the University of Southern California, the Institute of Cardiology in Russia, and the University of Guadalajara, Mexico, showed that consumption of dark chocolate helps improve blood flow, lower blood pressure, lowers LDL blood cholesterol (bad cholesterol), increases HDL cholesterol (good cholesterol), improves vascular function, and reduces the risk of stroke.

SubQuestion No : 27

Q.27 Arrange the following steps of producing chocolate in a proper sequence.

- A. The cocoa beans are laid out in the sun to ferment.**
- B. Cocoa pods are hand-harvested.**
- C. The dried cocoa beans are cracked open and the shells are removed.**
- D. Refinement of cocoa liquor to extract cocoa powder.**
- E. Roasted nibs are ground into a liquid called cocoa liquor.**

- Ans**
- 1. ABCDE
 - 2. BEDCA
 - 3. BACED
 - 4. EDBCA

Question Type : **MCQ**

Question ID : **630680367024**

Status : **Answered**

Chosen Option : **3**

Marks : **1**

Comprehension:

Read the following information carefully and answer the given questions.

Chocolate is made from cocoa beans that grow on cacao trees, originally native to Central America and now grown in tropical climates throughout the world. A single cacao tree produces 20 to 30 cocoa pods per year, and each pod contains around 40 cocoa beans. It takes one year's yield from a single tree to produce about five dark chocolate bars.

Cocoa pods mature on the vine and are hand-harvested, then cut open to dry. The cocoa beans, covered in a white pulp, are laid out in the sun to ferment, and the chocolate flavor starts to emerge. Different types of fermentation processes result in different flavors of chocolate. The dried beans are then cracked open, the shells are removed, and the remaining cocoa nibs are roasted.

The roasting process also affects the flavor of the cocoa nibs. Roasted nibs are ground into a liquid called cocoa liquor, which is free of alcohol and contains 50 to 60 percent cocoa butter. From there the cocoa liquor can be further refined into cocoa powder, or other ingredients like sugar, vanilla, nuts, fruits, or milk can be added to the cocoa liquor to make chocolate bars.

Dark chocolate contains 60 percent or more cocoa, and no milk. Milk chocolate only contains 5 to 7 percent cocoa, and white chocolate doesn't contain any cocoa at all—just cocoa butter and milk. As with berries and leafy greens, the darker the color of the chocolate, the more antioxidant properties it contains and the better it is for you. Also, milk binds to the antioxidants eliminating their ability to fight free radicals, so eating milk chocolate or drinking milk with dark chocolate has few to no health benefits.

Chocolate has been used for its healing properties for more than 3,000 years, and dates back to the early Mayans. Now researchers are finding scientific evidence for those healing properties.

Dark chocolate contains polyphenols, a powerful type of antioxidant that is also found in foods like berries, green and black tea, and red wine. These polyphenols help to defend the body's cells against free radicals from environmental toxins and diseases, including heart disease, cancer, and chronic inflammation. In fact, one study by Yale University Prevention Research Center indicated that chocolate contains more phenolic antioxidants than any other food.

Studies done at the University of Southern California, the Institute of Cardiology in Russia, and the University of Guadalajara, Mexico, showed that consumption of dark chocolate helps improve blood flow, lower blood pressure, lowers LDL blood cholesterol (bad cholesterol), increases HDL cholesterol (good cholesterol), improves vascular function, and reduces the risk of stroke.

SubQuestion No : 28

Q.28 Polyphenols is not found in which of the following food items?

- Ans**
- 1. Ginger
 - 2. Black tea
 - 3. Red wine
 - 4. Berries

Question Type : MCQ

Question ID : 630680367023

Status : Answered

Chosen Option : 1

Marks : 1

Comprehension:

Read the following information carefully and answer the given questions.

Chocolate is made from cocoa beans that grow on cacao trees, originally native to Central America and now grown in tropical climates throughout the world. A single cacao tree produces 20 to 30 cocoa pods per year, and each pod contains around 40 cocoa beans. It takes one year's yield from a single tree to produce about five dark chocolate bars.

Cocoa pods mature on the vine and are hand-harvested, then cut open to dry. The cocoa beans, covered in a white pulp, are laid out in the sun to ferment, and the chocolate flavor starts to emerge. Different types of fermentation processes result in different flavors of chocolate. The dried beans are then cracked open, the shells are removed, and the remaining cocoa nibs are roasted.

The roasting process also affects the flavor of the cocoa nibs. Roasted nibs are ground into a liquid called cocoa liquor, which is free of alcohol and contains 50 to 60 percent cocoa butter. From there the cocoa liquor can be further refined into cocoa powder, or other ingredients like sugar, vanilla, nuts, fruits, or milk can be added to the cocoa liquor to make chocolate bars.

Dark chocolate contains 60 percent or more cocoa, and no milk. Milk chocolate only contains 5 to 7 percent cocoa, and white chocolate doesn't contain any cocoa at all—just cocoa butter and milk. As with berries and leafy greens, the darker the color of the chocolate, the more antioxidant properties it contains and the better it is for you. Also, milk binds to the antioxidants eliminating their ability to fight free radicals, so eating milk chocolate or drinking milk with dark chocolate has few to no health benefits.

Chocolate has been used for its healing properties for more than 3,000 years, and dates back to the early Mayans. Now researchers are finding scientific evidence for those healing properties.

Dark chocolate contains polyphenols, a powerful type of antioxidant that is also found in foods like berries, green and black tea, and red wine. These polyphenols help to defend the body's cells against free radicals from environmental toxins and diseases, including heart disease, cancer, and chronic inflammation. In fact, one study by Yale University Prevention Research Center indicated that chocolate contains more phenolic antioxidants than any other food.

Studies done at the University of Southern California, the Institute of Cardiology in Russia, and the University of Guadalajara, Mexico, showed that consumption of dark chocolate helps improve blood flow, lower blood pressure, lowers LDL blood cholesterol (bad cholesterol), increases HDL cholesterol (good cholesterol), improves vascular function, and reduces the risk of stroke.

SubQuestion No : 29

Q.29 According to the given passage, which of the following statements is incorrect?

- Ans** 1. White chocolate doesn't contain any cocoa at all.
2. Antioxidant properties of the chocolate is inversely proportional to the colour of the chocolate
3. Cocoa liquor is free of alcohol and contains more than 40 percent cocoa butter.
4. Cacao trees are now grown in tropical climates throughout the world.

Question Type : MCQ

Question ID : 630680367022

Status : Answered

Chosen Option : 2

Marks : 1

Comprehension:

Read the following information carefully and answer the given questions.

Chocolate is made from cocoa beans that grow on cacao trees, originally native to Central America and now grown in tropical climates throughout the world. A single cacao tree produces 20 to 30 cocoa pods per year, and each pod contains around 40 cocoa beans. It takes one year's yield from a single tree to produce about five dark chocolate bars. Cocoa pods mature on the vine and are hand-harvested, then cut open to dry. The cocoa beans, covered in a white pulp, are laid out in the sun to ferment, and the chocolate flavor starts to emerge. Different types of fermentation processes result in different flavors of chocolate. The dried beans are then cracked open, the shells are removed, and the remaining cocoa nibs are roasted.

The roasting process also affects the flavor of the cocoa nibs. Roasted nibs are ground into a liquid called cocoa liquor, which is free of alcohol and contains 50 to 60 percent cocoa butter. From there the cocoa liquor can be further refined into cocoa powder, or other ingredients like sugar, vanilla, nuts, fruits, or milk can be added to the cocoa liquor to make chocolate bars.

Dark chocolate contains 60 percent or more cocoa, and no milk. Milk chocolate only contains 5 to 7 percent cocoa, and white chocolate doesn't contain any cocoa at all—just cocoa butter and milk. As with berries and leafy greens, the darker the color of the chocolate, the more antioxidant properties it contains and the better it is for you. Also, milk binds to the antioxidants eliminating their ability to fight free radicals, so eating milk chocolate or drinking milk with dark chocolate has few to no health benefits.

Chocolate has been used for its healing properties for more than 3,000 years, and dates back to the early Mayans. Now researchers are finding scientific evidence for those healing properties.

Dark chocolate contains polyphenols, a powerful type of antioxidant that is also found in foods like berries, green and black tea, and red wine. These polyphenols help to defend the body's cells against free radicals from environmental toxins and diseases, including heart disease, cancer, and chronic inflammation. In fact, one study by Yale University Prevention Research Center indicated that chocolate contains more phenolic antioxidants than any other food.

Studies done at the University of Southern California, the Institute of Cardiology in Russia, and the University of Guadalajara, Mexico, showed that consumption of dark chocolate helps improve blood flow, lower blood pressure, lowers LDL blood cholesterol (bad cholesterol), increases HDL cholesterol (good cholesterol), improves vascular function, and reduces the risk of stroke.

SubQuestion No : 30

Q.30 Which of the following questions is not answered by the given passage?

- Ans
- 1. What are the health benefits of dark chocolates?
 - 2. Why dark chocolate is better than milk chocolate?
 - 3. What processes are involved when making chocolates?
 - 4. What are the side effects of eating too much white chocolate?

Question Type : MCQ

Question ID : 630680367021

Status : Answered

Chosen Option : 4

Marks : 1

Section : Material Management

Q.1 Which of these does not fall under the category of a Control Chart for variables?

- Ans
- 1. Temperature of a baking oven
 - 2. Number of broken cookies in the jar
 - 3. Bag of sugar
 - 4. Diameter of plastic tubing

Question Type : MCQ

Question ID : 630680367090

Status : Answered

Chosen Option : 1

Marks : - 1/4

Q.2 Which Process Control System is found in manufacturing, motion and packaging applications such as Robotic assembly?

- Ans
- 1. Batch
 - 2. Continuous
 - 3. Discrete
 - 4. Random

Question Type : MCQ
Question ID : 630680367088
Status : Not Answered
Chosen Option : --
Marks : 0

Q.3 What is the primary purpose of the Air Waybill (AWB) in air transportation?

- Ans
- 1. Concluding a contract with the air carrier
 - 2. Serving as a customs declaration
 - 3. Confirming cargo delivery
 - 4. Serving as signed confirmation of the concluded contract of carriage based on the CMR Convention

Question Type : MCQ
Question ID : 630680367075
Status : Not Answered
Chosen Option : --
Marks : 0

Q.4 Which of these is not incorrect about the Bin Card?

- Ans
- 1. It reflects the monetary value of the stocks
 - 2. It reveals the balance of material at any point of time.
 - 3. It records the entry when materials are received or issued
 - 4. It is a slip or tag attached to the lot

Question Type : MCQ
Question ID : 630680367039
Status : Not Answered
Chosen Option : --
Marks : 0

Q.5 Which of these is/are the advantages of the Centralised Purchasing System?

1. Ensure consistent policy and avoids haphazard buying
2. Wrong purchase of material can be made.
3. Relives the departmental heads of the responsibility to procure

- Ans
- 1. 1 and 2 Only
 - 2. 2 and 3 Only
 - 3. All 1, 2 and 3
 - 4. 1 and 3 Only

Question Type : MCQ
Question ID : 630680367051
Status : Not Answered
Chosen Option : --
Marks : 0

Q.6 Which of the following is a disadvantage of Online Shopping? Mark the option as your answer.

- Ans
- 1. Price
 - 2. Convenience
 - 3. Hands on inspection
 - 4. Selection

Question Type : MCQ
Question ID : 630680367058
Status : Answered
Chosen Option : 3
Marks : 1

Q.7 The CMR consignment note is primarily utilized for which mode of transportation?

- Ans
- 1. Water
 - 2. Rail
 - 3. Air
 - 4. Road

Question Type : MCQ
Question ID : 630680367074
Status : Not Answered
Chosen Option : --
Marks : 0

Q.8 Which of the following belong(s) to the Fixed Path Equipment?

1. Forklifts
2. Conveyors
3. Pulley drive
4. Monorail devices

- Ans
- 1. 1, 3 and 4 Only
 - 2. 2, 3 and 4 Only
 - 3. 1, 2 and 3 Only
 - 4. All 1, 2, 3 and 4

Question Type : MCQ
Question ID : 630680367049
Status : Answered
Chosen Option : 4
Marks : - 1/4

Q.9 Which of these has the objective to find out the best seller/service provider available in the market in terms of both quality of the products and their cost?

- Ans
- 1. Letter of Adjustment
 - 2. Tender
 - 3. Placing Order
 - 4. Inviting Quotation

Question Type : MCQ
Question ID : 630680367063
Status : Answered
Chosen Option : 4
Marks : 1

Q.10 Which of the following is the second stage of the Receiving Procedure of incoming materials?

- Ans
- 1. Completion of the receiving report.
 - 2. Unpacked and inspecting the material
 - 3. Unloading and checking the shipment
 - 4. Delivery of the materials

Question Type : MCQ
Question ID : 630680367038
Status : Answered
Chosen Option : 2
Marks : 1

Q.11 Which of the following activities falls under the category of Tactical Activities of Supply Chain?

- Ans
- 1. Partnerships with suppliers and supplier selection
 - 2. Working with logistics companies to develop warehouse strategies to reduce cost of storing inventory.
 - 3. Purchasing agreements with suppliers
 - 4. Deciding the flow of material through the logistics network

Question Type : MCQ
Question ID : 630680367028
Status : Answered
Chosen Option : 2
Marks : 1

Q.12 Which of the following is an example of Direct Inventory that plays a direct role in the manufacture of a product?

- Ans
- 1. Abrasive mat
 - 2. Tools
 - 3. Raw materials
 - 4. Oil greases

Question Type : MCQ
Question ID : 630680367100
Status : Answered
Chosen Option : 3
Marks : 1

Q.13 Which of the following is not an element of the Process?

1. People
2. Material
3. Environment
4. Packaging

Ans 1. Only 3 and 4
 2. Only 2
 3. Only 4
 4. Only 1 and 3

Question Type : MCQ
Question ID : 630680367089
Status : Not Answered
Chosen Option : --
Marks : 0

Q.14 Which of the following is not a characteristic of Industrial Trucks used for Material Handling?

Ans 1. These are more flexible in use and can move between various points
 2. They are most suitable for intermittent production
 3. They have wide range of attachments which increase the trucks ability to handle various types and shapes of materials
 4. They can move heavy materials through overhead space.

Question Type : MCQ
Question ID : 630680367050
Status : Not Answered
Chosen Option : --
Marks : 0

Q.15 Which of the following is/are the characteristics of inviting Tenders?

1. Invited through public media such as newspapers, magazines etc.
2. Invited when something is required in large quantities.
3. Earnest money is submitted along with the invitation.

Ans 1. Only 1 and 3
 2. All 1, 2 and 3
 3. Only 2 and 3
 4. Only 1

Question Type : MCQ
Question ID : 630680367064
Status : Not Answered
Chosen Option : --
Marks : 0

Q.16 Which of these is a false assumption considered in the Economic Order Quantity Model?

1. Demand is assumed to be uniform
2. Purchase price per unit is dependent on the quantity ordered.
3. Carrying cost is proportional to the quantity stored.
4. Lead time for deliveries is varying.

- Ans
- 1. 1 and 3 Only
 - 2. 2, 3 and 4 Only
 - 3. 2 and 4 Only
 - 4. 1, 2 and 3 Only

Question Type : MCQ
Question ID : 630680367101
Status : Not Answered
Chosen Option : --
Marks : 0

Q.17 In which type of the method the materials issued are charged the prevailing rates where it underestimates the stock on hand in case of price increase and vice versa?

- Ans
- 1. Weighted Average Cost System
 - 2. Market Value System
 - 3. Standard Cost System
 - 4. Average Cost System

Question Type : MCQ
Question ID : 630680367044
Status : Not Answered
Chosen Option : --
Marks : 0

Q.18 Which of the following is used by people to advertise and sell their used household goods, cars etc. or rent homes and apartments?

- Ans
- 1. Craigslist
 - 2. Amazon
 - 3. Etsy
 - 4. Groupon

Question Type : MCQ
Question ID : 630680367060
Status : Not Answered
Chosen Option : --
Marks : 0

Q.19 Which of the following is/are requirements one should follow before shopping online?

1. Installing anti-virus software
2. Deal with businesses accredited by Better business Bureau
3. Shop on websites that begin with "http://".

Ans 1. 1 and 2 Only

2. 2 and 3 Only

3. 1 and 3 Only

4. All 1, 2 and 3

Question Type : MCQ

Question ID : 630680367061

Status : Not Answered

Chosen Option : --

Marks : 0

Q.20 _____ is a disadvantage of using the Last In First Out Method.

Ans 1. Better matching of current cost with current revenues.

2. Reduce the burden of income tax

3. Stock in hand is valued at the oldest price.

4. No profit or loss on accounts

Question Type : MCQ

Question ID : 630680367043

Status : Answered

Chosen Option : 4

Marks : - 1/4

Q.21 In air transportation, what characteristic factor can potentially hinder its cost-effectiveness, especially for the movement of bulky goods or large volumes of cargo?

Ans 1. Variable schedules

2. High operating costs

3. Slow speed

4. Limited global reach

Question Type : MCQ

Question ID : 630680367072

Status : Not Answered

Chosen Option : --

Marks : 0

Q.22 The characteristics of Range (R) charts
1. It controls general variability of the process.
2. It is affected by changes on process variability.
3. It is generally used along with C charts.

- Ans
- 1. 2 and 3 Only
 - 2. Only 1
 - 3. Only 3
 - 4. 1 and 2 Only

Question Type : MCQ
Question ID : 630680367092
Status : Not Answered
Chosen Option : --
Marks : 0

Q.23 Which law has provided definitions for terms like 'Warehouse', 'Depositor' and 'Warehouseman' in the context of warehousing in India?

- Ans
- 1. Warehousing and Storage Act, 1965
 - 2. Bombay Warehousing Act, 1959
 - 3. Storage Regulations and Licensing Act
 - 4. Goods Storage and Warehousing Law

Question Type : MCQ
Question ID : 630680367078
Status : Not Answered
Chosen Option : --
Marks : 0

Q.24 Which of the following is an agreement done for a required quantity of specified items, over a period of time at an agreed price?

- Ans
- 1. Forward Buying
 - 2. Tender Buying
 - 3. Rate Contract system
 - 4. Blanket Order

Question Type : MCQ
Question ID : 630680367055
Status : Answered
Chosen Option : 3
Marks : - 1/4

Q.25 The implementation of an IIMS in material management aims to achieve :

- Ans
- 1. Limited accessibility to information
 - 2. Slower communication between departments
 - 3. Complexity in data management
 - 4. Efficient coordination of supply chain activities

Question Type : MCQ
Question ID : 630680367105
Status : Not Answered
Chosen Option : --
Marks : 0

Q.26 Which of the following is not true about the Acceptance Sampling?

- Ans
- 1. It is possible to carry out sample inspection at various stages
 - 2. It decided on either to accept or to reject lots based on inspection of samples.
 - 3. It is expensive than 100 percent inspection
 - 4. It uses statistical sampling

Question Type : MCQ
Question ID : 630680367093
Status : Answered
Chosen Option : 3
Marks : 1

Q.27 What factor does a public warehouse operator need to consider when deciding on the warehousing charges?

- Ans
- 1. Operating costs
 - 2. Handling costs
 - 3. Level of unit throughput
 - 4. Fixed costs

Question Type : MCQ
Question ID : 630680367082
Status : Answered
Chosen Option : 3
Marks : 1

Q.28 The Call to Order Agenda item calls the meetings to order which may be followed by any opening ceremony.

1. Invocation
2. Roll Call
3. Pledge of Allegiance

- Ans
- 1. 1 and 2 Only
 - 2. All 1, 2 and 3
 - 3. 2 and 3 Only
 - 4. 1 and 3 Only

Question Type : MCQ
Question ID : 630680367066
Status : Not Answered
Chosen Option : --
Marks : 0

Q.29 In which type of sampling, a sample of n-items is drawn from a lot, where the lot is accepted if the number of defectives in the sample is less than the acceptance number or else rejected?

- Ans
- 1. Acceptance Double Sampling
 - 2. Acceptance Simple Sampling
 - 3. Clustering Sampling
 - 4. Random Sampling

Question Type : MCQ
Question ID : 630680367036
Status : Answered
Chosen Option : 4
Marks : - 1/4

Q.30 Which ISO standard is an international standard for auditing management systems which provides guidance for conducting internal and external audits of quality, environment, health and safety?

- Ans
- 1. ISO 9001:2015
 - 2. ISO 19011:2018
 - 3. ISO 19011:2001
 - 4. ISO 9001:2008

Question Type : MCQ
Question ID : 630680367085
Status : Not Answered
Chosen Option : --
Marks : 0

Q.31 What is the term used to describe a person who lawfully holds a receipt issued by the warehouseman and holds title to the goods?

- Ans
- 1. Carrier
 - 2. Transferee
 - 3. Depositor
 - 4. Warehouseman

Question Type : MCQ
Question ID : 630680367077
Status : Answered
Chosen Option : 2
Marks : - 1/4

Q.32 What are the three major elements of warehousing?

- Ans
- 1. Inventory, Demand, Location
 - 2. Space, Equipment, People
 - 3. Location, Technology, Inventory
 - 4. Equipment, Technology, Demand

Question Type : MCQ
Question ID : 630680367079
Status : Answered
Chosen Option : 1
Marks : - 1/4

Q.33 Which department in Production Planning uses computers to examine past orders, keep track of the competition and analyze where the orders have been lost?

- Ans
- 1. Sales Department
 - 2. Purchasing department
 - 3. Dispatch department
 - 4. Design department

Question Type : MCQ
Question ID : 630680367097
Status : Answered
Chosen Option : 2
Marks : - 1/4

Q.34 The technique of Statistical Quality Control (S.Q. C) was developed by who among the following?

- Ans
- 1. Walter Shewartan
 - 2. Shigeo Shingo
 - 3. W. Edwards Deming
 - 4. David Garvin

Question Type : MCQ
Question ID : 630680367087
Status : Answered
Chosen Option : 3
Marks : - 1/4

Q.35 How does an IIS assist in demand forecasting for material management?

- Ans
- 1. By avoiding technology usage
 - 2. By relying solely on historical data
 - 3. By isolating departments
 - 4. By facilitating real-time data sharing

Question Type : MCQ
Question ID : 630680367103
Status : Not Answered
Chosen Option : --
Marks : 0

Q.36 Which of these is not a criteria of Business Letters?

1. Definite format
2. Subjective in nature
3. Formal and direct

- Ans
- 1. Only 1 and 3
 - 2. Only 2
 - 3. Only 1
 - 4. All 1, 2 and 3

Question Type : MCQ
Question ID : 630680367062
Status : Answered
Chosen Option : 2
Marks : 1

Q.37 Which of the following is/are benefits of using a Credit Card for purchasing online?

1. It provides zero liability protection from frauds
2. It provides credit protector services that alert fishy activity
3. It is directly linked with the bank account making it convenient.

Ans 1. 1 and 2 Only

2. All 1, 2 and 3

3. 1 and 3 Only

4. 2 and 3 Only

Question Type : MCQ

Question ID : 630680367059

Status : Answered

Chosen Option : 4

Marks : - 1/4

Q.38 Which of the following is the correct sequence involved in the Purchase procedure?

Ans 1. Purchase requisition > Supplier selection > Purchase Order > Receiving & Inspection > Checking & Passing Bills of Payment

2. Purchase Order > Supplier selection > Purchase Requisition > Receiving & Inspection > Checking & Passing Bills of Payment

3. Purchase requisition > Purchase Order > Supplier selection > Receiving & Inspection > Checking & Passing Bills of Payment

4. Supplier selection > Purchase Order > Purchase requisition > Receiving & Inspection > Checking & Passing Bills of Payment

Question Type : MCQ

Question ID : 630680367054

Status : Answered

Chosen Option : 1

Marks : 1

Q.39 According to Bean, which of the following is not identified as customer service KRA in the area of Materials Management?

Ans 1. Innovation

2. Market Standing

3. Convenience

4. Efficiency

Question Type : MCQ

Question ID : 630680367030

Status : Not Answered

Chosen Option : --

Marks : 0

Q.40 Which of these is/are the situations where sampling inspection is needed

1. Destructive Testing
2. When higher inspection costs are desired.
3. Inspecting long length of goods
4. Inspecting smaller amounts

Ans 1. 1 and 3 Only

2. All 1, 2 and 3

3. 2 and 3 Only

4. 1 Only

Question Type : MCQ

Question ID : 630680367037

Status : Answered

Chosen Option : 1

Marks : 1

Q.41 Which of the following correctly defines the ISO 9001 Standard?

Ans 1. Model for quality assurance to achieve sustained success and continual improvement in an organization performance.

2. Model for quality assurance in design, development, production, installation and servicing

3. Model that provides standards which provides the requirements for a quality management system.

4. Model for quality assurance in final inspection and testing stage.

Question Type : MCQ

Question ID : 630680367084

Status : Not Answered

Chosen Option : --

Marks : 0

Q.42 The following come(s) under the category of Attribute Charts?

1. P Chart
2. np Chart
3. R chart
4. C chart

Ans 1. 1 and 2 Only

2. 1, 2 and 4 Only

3. 2 and 3 Only

4. 2, 3 and 4 Only

Question Type : MCQ

Question ID : 630680367091

Status : Answered

Chosen Option : 2

Marks : 1

Q.43 _____ is a contract between the buyer and the supplier that binds both to the terms under which the order is placed.

- Ans
- 1. Purchase Order
 - 2. Goods Received Note
 - 3. Issue Note
 - 4. Purchase Requisition

Question Type : MCQ
Question ID : 630680367052
Status : Answered
Chosen Option : 1
Marks : 1

Q.44 In which type of warehousing does the arrangement often involve a long-term agreement in terms of duration?

- Ans
- 1. Public Warehouse
 - 2. Contract or Dedicated Warehouse
 - 3. None of the given
 - 4. Private Warehouse

Question Type : MCQ
Question ID : 630680367083
Status : Answered
Chosen Option : 2
Marks : 1

Q.45 Which mode of transportation is best suited for moving large volumes of bulky goods over long distances, with a requirement for high traffic volume to absorb fixed costs?

- Ans
- 1. Air Transportation
 - 2. Rail Transportation
 - 3. Road Transportation
 - 4. Water Transportation

Question Type : MCQ
Question ID : 630680367071
Status : Answered
Chosen Option : 4
Marks : - 1/4

Q.46 Which type of information is typically recorded in a store ledger?

- Ans
- 1. Customer contact information
 - 2. Stock quantities, descriptions and dates of transactions
 - 3. Employee payroll details
 - 4. Sales and marketing expenses

Question Type : MCQ
Question ID : 630680367041
Status : Answered
Chosen Option : 2
Marks : 1

Q.47 Which of the following is not an objective of Supply Chain Management? Mark the option as your answer.

- Ans
- 1. Reducing inventory cost
 - 2. Expanding depth of distribution
 - 3. Expanding Lead time
 - 4. Reducing order to delivery cycle time

Question Type : MCQ
Question ID : 630680367027
Status : Answered
Chosen Option : 3
Marks : 1

Q.48 Which of the following is a characteristic of the Open Stores System?

1. It involves maximum physical security and tight accounting control
2. It expedites production activities and reduces handling.
3. It is used for fast moving production and assembly lines.

- Ans
- 1. 2 and 3 Only
 - 2. 1 and 2 Only
 - 3. All 1, 2 and 3
 - 4. 1 and 3 Only

Question Type : MCQ
Question ID : 630680367033
Status : Answered
Chosen Option : 1
Marks : 1

Q.49 Which of the following is represented by that portion of production which can be rectified and turned into good units?

1. Defectives
2. Spoilage
3. Wastage
4. Scrap

- Ans
- 1. Only 4
 - 2. Only 2
 - 3. Only 1
 - 4. Only 3

Question Type : MCQ
Question ID : 630680367046
Status : Answered
Chosen Option : 3
Marks : 1

Q.50 Which of the following is NOT considered a major aspect of strategic logistics planning?

- Ans 1. Reducing costs
2. Leveraging Logistics
3. Evaluating the Impact of Proposed Corporate Strategic Plans
4. Supporting the Corporate Strategic Plan

Question Type : MCQ
Question ID : 630680367067
Status : Answered
Chosen Option : 3
Marks : - 1/4

Q.51 Which of the following is/are the objectives of Materials Management?

1. Minimization of materials costs.
2. Reduce inventory for use in production process.
3. Develop low inventory turnover ratio.

- Ans 1. Only 1 and 2
2. All 1, 2 and 3
3. Only 2 and 3
4. Only 1 and 3

Question Type : MCQ
Question ID : 630680367026
Status : Answered
Chosen Option : 3
Marks : - 1/4

Q.52 Which of the following is an example of Space Cost in inventory control?

- Ans 1. Rent of the building
2. Insurance premium
3. Staff salary
4. Working Capital

Question Type : MCQ
Question ID : 630680367099
Status : Answered
Chosen Option : 1
Marks : 1

Q.53 Which of these is not true about the FIFO System?

1. It is based on the assumption that the oldest stock is depleted first.
2. It stabilizes the cost figures.

- Ans 1. Only 2
2. Only 1
3. Both 1 and 2
4. Neither 1 nor 2

Question Type : MCQ
Question ID : 630680367042
Status : Answered
Chosen Option : 3
Marks : - 1/4

Q.54 Which of the following is the maximum % defective that can be considered satisfactory as a process average for sampling inspection?

- Ans
- 1. LTPD
 - 2. AQL
 - 3. RQL
 - 4. LTP

Question Type : MCQ
Question ID : 630680367094
Status : Answered
Chosen Option : 1
Marks : - 1/4

Q.55 The process of matching supply and demand by determining the right quantity and timing of products to be produced or procured is known as?

- Ans
- 1. Inventory management
 - 2. Production scheduling
 - 3. Quality control
 - 4. Order fulfillment

Question Type : MCQ
Question ID : 630680367068
Status : Answered
Chosen Option : 1
Marks : - 1/4

Q.56 The Store Ledger Accounts consists of

1. Amount of Receipts
2. Issues
3. Details of the quantity

- Ans
- 1. Only 1
 - 2. Only 2
 - 3. Only 1 and 3
 - 4. All 1, 2 and 3

Question Type : MCQ
Question ID : 630680367040
Status : Answered
Chosen Option : 4
Marks : 1

Q.57 _____ is a statement that defines the organization's commitment to quality and outlines the objectives and targets for the QMS.

- Ans
- 1. Work instructions
 - 2. Objectives and targets
 - 3. Quality policy
 - 4. Quality manual

Question Type : MCQ
Question ID : 630680367086
Status : Answered
Chosen Option : 4
Marks : - 1/4

Q.58 Which department in Production Planning uses computers to know the size of crates and weights, calculate freight charges and determine economical size of crating to suit the particular form of transport?

- Ans
- 1. Design department
 - 2. Sales Department
 - 3. Manufacturing department
 - 4. Dispatch department

Question Type : MCQ
Question ID : 630680367098
Status : Answered
Chosen Option : 4
Marks : 1

Q.59 What does a contract or dedicated warehousing involve?

- Ans
- 1. Offering services to multiple users
 - 2. A short-term agreement for supplemental services
 - 3. A combination of public and private warehousing
 - 4. An independent storage unit

Question Type : MCQ
Question ID : 630680367081
Status : Answered
Chosen Option : 2
Marks : - 1/4

Q.60 Which of these is not related to the advantages of using computers in the field of Purchasing?

- Ans
- 1. Information on vendor evaluation
 - 2. Preparation of bill of Materials
 - 3. Routine purchase order follow up
 - 4. Warning signals for orders which have to expedited

Question Type : MCQ
Question ID : 630680367096
Status : Answered
Chosen Option : 3
Marks : - 1/4

Q.61 Which of the following is referred to as the complete process of verifying the quantity balances of the entire range of items held in stock?

- Ans
- 1. Indent
 - 2. Reserve of Stock
 - 3. Materials at site Account
 - 4. Stock Taking

Question Type : MCQ
Question ID : 630680367035
Status : Answered
Chosen Option : 4
Marks : 1

Q.62 Which material handling principle reduces unproductive time of both MH equipment and manpower?

- Ans
- 1. Performance principle
 - 2. Equipment selection principle
 - 3. Idle time principle
 - 4. Capacity principle

Question Type : MCQ
Question ID : 630680367047
Status : Answered
Chosen Option : 3
Marks : 1

Q.63 Which part of the Inverted Pyramid Structure of a Memo explains the who, what, when, where and how of the memo?

- Ans
- 1. Lead
 - 2. Tail
 - 3. Body
 - 4. Tip

Question Type : MCQ
Question ID : 630680367065
Status : Not Answered
Chosen Option : --
Marks : 0

Q.64 Among the following transportation modes, which one is generally considered the cheapest for transporting goods over long distances and large volumes?

- Ans
- 1. Air Transportation
 - 2. Rail Transportation
 - 3. Water Transportation
 - 4. Road Transportation

Question Type : MCQ
Question ID : 630680367070
Status : Answered
Chosen Option : 3
Marks : 1

Q.65 What does the function of warehousing "product mixing" refer to?

- Ans
- 1. Combining different product lines within a single factory
 - 2. Separating products for distribution purposes
 - 3. Mixing products within the manufacturing process
 - 4. Creating new products by mixing various raw materials

Question Type : MCQ
Question ID : 630680367080
Status : Answered
Chosen Option : 1
Marks : 1

Q.66 Which sampling plan is used when three or more samples of stated size are permitted and when the decision on acceptance or rejection must be reached after a stated number of samples?

- Ans
- 1. Sequential Sampling Plan
 - 2. Stratified Sampling Plan
 - 3. Double Sampling Plan
 - 4. Single Sampling Plan

Question Type : MCQ
Question ID : 630680367095
Status : Not Answered
Chosen Option : --
Marks : 0

Q.67 What software application is commonly used for managing material order, tracking inventory, and coordinating supplier interactions?

- Ans
- 1. Enterprise Resource Planning software
 - 2. Presentation software
 - 3. Word processing software
 - 4. Spreadsheet software

Question Type : MCQ
Question ID : 630680367102
Status : Not Answered
Chosen Option : --
Marks : 0

Q.68 What technology enables remote access to the integrated material management system, enhancing flexibility and collaboration?

- Ans
- 1. Fax machines
 - 2. Rotary phones
 - 3. Cloud computing
 - 4. Floppy disks

Question Type : MCQ
Question ID : 630680367104
Status : Answered
Chosen Option : 3
Marks : 1

Q.69 Which of the following is/are the functions of Storekeeping?

1. Supervision of the clearance of incoming supplies
2. Issuing supplies against authorized requisitions
3. Virtual handling and well being of the stocks.

Ans 1. 1 and 3 Only
 2. 2 and 3 Only
 3. All 1, 2 and 3
 4. 1 and 2 Only

Question Type : MCQ
Question ID : 630680367032
Status : Answered
Chosen Option : 3
Marks : - 1/4

Q.70 Which of the following statements is/are false about the Purchase Procedure?

1. Purchase requisition note is prepared by the purchasing departments.
2. Original copy of the purchase order is sent to the supplier.
3. Good received note is prepared by a good receiving department.
4. Payment of the invoice is made by the purchase department.

Ans 1. 1 and 4 Only
 2. 2, 3 and 4 Only
 3. 2 and 3 Only
 4. 1, 2 and 3 Only

Question Type : MCQ
Question ID : 630680367053
Status : Answered
Chosen Option : 1
Marks : 1

Q.71 Which of the following is/are incorrect about the accounting treatment of Scrap?

1. If the sale value of scrap is negligible, it is transferred to the costing profit and loss account as Ab-normal gain.
2. The net sale proceeds of scrap is added to the material cost/factory overhead.

Ans 1. Only 2
 2. Only 1
 3. Both 1 and 2
 4. Neither 1 nor 2

Question Type : MCQ
Question ID : 630680367045
Status : Not Answered
Chosen Option : --
Marks : 0

Q.72 Which of the following is/are not the features of the Zero Stock System?
1. It functions on the basis of zero stock where stock is held by the buyer.
2. No huge amount of capital is locked in the system.
3. Reduction of obsolescence of inventory and lead time.

- Ans 1. Only 1 and 3
 2. Only 1
 3. Only 2 and 3
 4. Only 2

Question Type : MCQ
Question ID : 630680367056
Status : Not Answered
Chosen Option : --
Marks : 0

Q.73 Which of these affects the selection of material handling equipments
1. Layout & characteristics of the building
2. Production flow

- Ans 1. Only 1
 2. Both 1 and 2
 3. Neither 1 nor 2
 4. Only 2

Question Type : MCQ
Question ID : 630680367048
Status : Answered
Chosen Option : 1
Marks : - 1/4

Q.74 Which of the following is/are the account records under Issues?
1. Indentation Procedure
2. Bin Cards
3. Goods Received Sheet

- Ans 1. Only 3
 2. Only 1 and 3
 3. Only 2 and 3
 4. Only 1

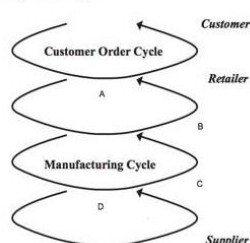
Question Type : MCQ
Question ID : 630680367034
Status : Answered
Chosen Option : 2
Marks : - 1/4

Q.75 What is one of the main factors influencing logistics planning?

- Ans 1. Reducing market reach
 2. Demand for improved customer service
 3. Increasing production capacity
 4. Expanding product variety

Question Type : MCQ
 Question ID : 630680367069
 Status : Answered
 Chosen Option : 2
 Marks : 1

Q.76 Given below is the diagrammatic representation of the Cycle view of the supply chain, fill in the labels A, B, C and D respectively?



- Ans 1. A- Replenishment cycle, B- Manufacturer, C- Distributor & D- Procurement cycle
 2. A- Replenishment cycle, B- Distributor, C- Manufacturer & D- Procurement cycle
 3. A- Procurement cycle, B- Distributor, C- Manufacturer & D- Replenishment cycle
 4. A- Procurement cycle, B- Manufacturer, C- Distributor & D- Replenishment cycle

Question Type : MCQ
 Question ID : 630680367029
 Status : Not Answered
 Chosen Option : --
 Marks : 0

Q.77 What is the specific term used to describe a legally binding contract between a shipowner and a charterer in the context of shipping?

- Ans 1. Contract of Affreightment (COA)
 2. Agreement for Ship Haulage (ASH)
 3. Shipload Accord (SA)
 4. Chartering Covenant (CC)

Question Type : MCQ
 Question ID : 630680367076
 Status : Not Answered
 Chosen Option : --
 Marks : 0

Test

Prime

By Adda247

Previous Year Papers PDF

PRACTICE MORE, SCORE HIGHER!



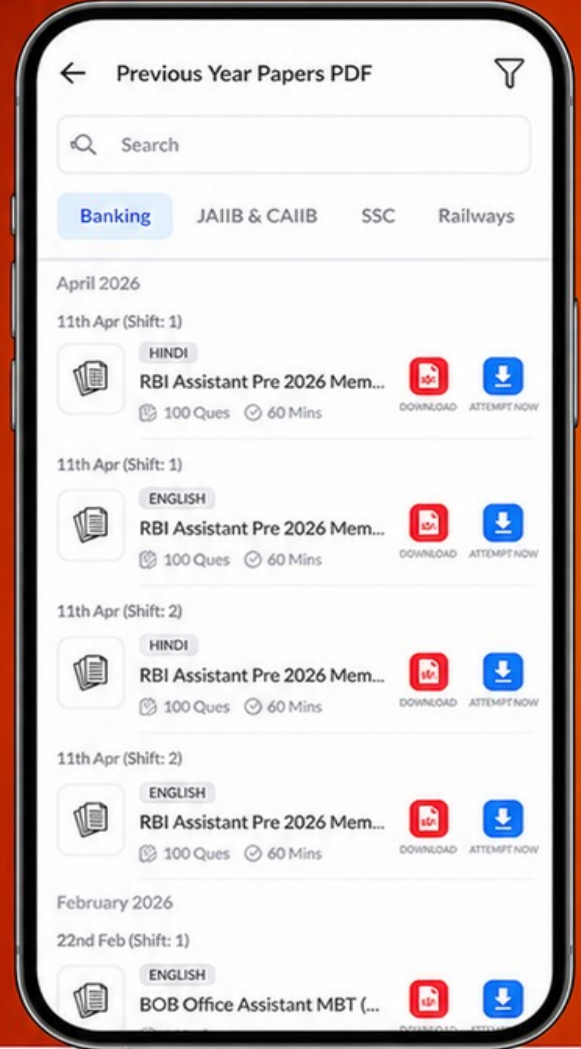
Free
25,000+
PDF's

High-Quality | Exam-Wise | Updated Regularly

ATTEMPT AS
MOCK



Turn PDFs into real exam experience.
Analyze. Improve. Succeed.



Topic-wise & Exam-wise PDFs



Download & Study Offline



Attempt as Mock & Track Score



Smart Analysis & Performance

AVAILABLE IN



Banking



SSC



Railway



Teaching



UGC



Agriculture



Nursing



Bihar



UP



Punjab



WB



Odisha



TN



AP & Telangana



Haryana



DOWNLOAD THE APP



Q.78 How does a consignment note relate to the physical and legal transfer of goods in international transportation?

- Ans
- 1. It replaces the commercial invoice
 - 2. It serves as proof of payment
 - 3. It determines the import-export ratio
 - 4. It signifies the liability transfer to the carrier

Question Type : MCQ
Question ID : 630680367073
Status : Answered
Chosen Option : 2
Marks : - 1/4

Q.79 Which of the following is Step 3 in the Logistics Quality process?

- Ans
- 1. Current Levels of Performance
 - 2. Customer Requirements
 - 3. Quality Strategy
 - 4. Organizational Commitment

Question Type : MCQ
Question ID : 630680367031
Status : Not Answered
Chosen Option : --
Marks : 0

Q.80 Which type of special buying process is undertaken generally by the Government departments and Public Sector Undertakings to avoid favoritism and corruption?

- Ans
- 1. Forward buying
 - 2. Rate Contract System
 - 3. Reciprocity
 - 4. Tender Buying

Question Type : MCQ
Question ID : 630680367057
Status : Answered
Chosen Option : 4
Marks : 1