

AIMS

**Previous Year Paper
Storekeeper-cum-Clerk
01 Nov, 2023**



**Test
Prime**

By Adda247

ALL EXAMS, ONE SUBSCRIPTION



Test. Analyze. Improve. Repeat.



Don't just prepare. Perform.

Test Prime — built only for mock tests.



1,50,000+
Mock Tests



25,000+
Previous Year Papers



800+
Exam Covered



500% Refund
on Selection



5 lakh+
Free Quizzes



Daily
Free PDFs



Job Alerts
Stay Updated

- Multilingual
- Detailed Solution
- Strong and Weak Areas



**All India
Rankings**

Compete with lakhs.
Rank. Improve. Repeat.



← Adda247 test prime

Rating ▾

Editors' choice

New



Adda247 Test Prime
Adda Education • Education
Installed



DOWNLOAD THE APP



**AIIMS**
Bhubaneswarଅଖିଳ ଭାରତୀୟ ଆୟୁର୍ବିଜ୍ଞାନ ମଞ୍ଚାଳୟ, ଭୁବନେଶ୍ୱର
अखिल भारतीय आयुर्विज्ञान संस्थान, भुवनेश्वर
All India Institute of Medical Sciences, Bhubaneswar

Participant ID	
Participant Name	
Test Center Name	
Test Date	01/11/2023
Test Time	8:30 AM - 10:30 AM
Subject	Store Keeper cum Clerk

Section : General Intelligence and Reasoning

Q.1 In the following question, select the odd letter/letters from the given alternatives.

- Ans
- 1. JSH
 - 2. TCX
 - 3. MVE
 - 4. PZA

Question ID : 630680440776

Option 1 ID : 6306801720762

Option 2 ID : 6306801720763

Option 3 ID : 6306801720765

Option 4 ID : 6306801720764

Status : Answered

Chosen Option : 4

Q.2 From the given option figures, select the one in which the question figure is hidden/embedded.



Ans

✓ 1.



✗ 2.



✗ 3.



✗ 4.



Question ID : 630680440780

Option 1 ID : 6306801720781

Option 2 ID : 6306801720780

Option 3 ID : 6306801720778

Option 4 ID : 6306801720779

Status : Answered

Chosen Option : 1

Q.3 By Interchanging the given two numbers which of the following equation will be correct?
5 and 9

Ans ✗ 1. $5 + 9 \times 2 \div 3 = 12$

✗ 2. $9 + 5 \times 2 - 1 = 30$

✓ 3. $8 \div 2 + 9 \times 3 - 5 = 10$

✗ 4. $5 - 9 \times 1 + 2 = 10$

Question ID : 630680440787

Option 1 ID : 6306801720809

Option 2 ID : 6306801720808

Option 3 ID : 6306801720807

Option 4 ID : 6306801720806

Status : Answered

Chosen Option : 3

Q.4 What is the approximate value of $\sqrt[3]{510.91} + \sqrt{401.6} \times 3.98$?

- Ans
- 1. 98
 - 2. 72
 - 3. 88
 - 4. 106

Question ID : 630680440788
Option 1 ID : 6306801720811
Option 2 ID : 6306801720810
Option 3 ID : 6306801720813
Option 4 ID : 6306801720812
Status : Answered
Chosen Option : 3

Q.5 In the following question, select the related letters from the given alternatives.
YZNO : WWJJ :: UGFL : ?

- Ans
- 1. SOZG
 - 2. RQXP
 - 3. TIUX
 - 4. SDBG

Question ID : 630680440774
Option 1 ID : 6306801720755
Option 2 ID : 6306801720754
Option 3 ID : 6306801720757
Option 4 ID : 6306801720756
Status : Answered
Chosen Option : 4

Q.6 By Interchanging the given two numbers which of the following equation will be correct?
3 and 2

- Ans
- 1. $7 + 2 \times 1 - 6 \div 3 = 7$
 - 2. $3 - 4 \div 2 + 1 = 5$
 - 3. $3 + 2 \times 5 - 1 = 10$
 - 4. $3 + 2 \times 4 - 1 = 15$

Question ID : 630680440786
Option 1 ID : 6306801720804
Option 2 ID : 6306801720803
Option 3 ID : 6306801720805
Option 4 ID : 6306801720802
Status : Answered
Chosen Option : 1

Q.7 Five plays T1, T2, T3, T4 and T5 are to be staged from Monday to Friday of a week. On each day, only one play will be staged. T4 and T5 should not be the first or last to be staged. T5 should be staged immediately before T3. T2 should be staged immediately after T4. One play is staged between T1 and T2. How many plays are staged after T4?

- Ans 1. 3
 2. 0
 3. 2
 4. 1

Question ID : 630680440766
Option 1 ID : 6306801720724
Option 2 ID : 6306801720722
Option 3 ID : 6306801720723
Option 4 ID : 6306801720725
Status : Answered
Chosen Option : 1

Q.8 Eight women A, B, C, D, E, F, G and H are sitting around a circular table facing towards the centre (not necessarily in the same order). G is third to the right of B. C is second to the right of G. B is second to the left of E. D is to the immediate left of B. F is the immediate neighbour of B and E. H is second to the left of A. Which of the following statement(s) is/are correct?

- I. H is to the immediate left of C.
II. G is fourth to the right of D.

- Ans 1. Only I
 2. Only II
 3. Neither I nor II
 4. Both I and II

Question ID : 630680440764
Option 1 ID : 6306801720714
Option 2 ID : 6306801720715
Option 3 ID : 6306801720717
Option 4 ID : 6306801720716
Status : Answered
Chosen Option : 4

Q.9 If a mirror is placed on the line AB, then out of the option figures which figure will be the right image of the question figure?



Ans

✗ 1.



✓ 2.



✗ 3.



✗ 4.



Question ID : 630680440781
 Option 1 ID : 6306801720782
 Option 2 ID : 6306801720783
 Option 3 ID : 6306801720784
 Option 4 ID : 6306801720785

Status : Answered

Chosen Option : 2

Q.10 In the following question, select the figure which can be placed at the sign of question mark (?) from the given alternatives.



Ans



Question ID : 630680440779
 Option 1 ID : 6306801720776
 Option 2 ID : 6306801720777
 Option 3 ID : 6306801720775
 Option 4 ID : 6306801720774
 Status : Answered
 Chosen Option : 4

Q.11 In the following question, select the odd letter/letters from the given alternatives.

- Ans
- ✗ 1. VKYL
 - ✗ 2. PESF
 - ✗ 3. FUIV
 - ✓ 4. TJYL



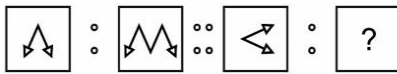
Question ID : 630680440777
 Option 1 ID : 6306801720768
 Option 2 ID : 6306801720767
 Option 3 ID : 6306801720769
 Option 4 ID : 6306801720766
 Status : Answered
 Chosen Option : 4

Q.12 In a certain code language, 'VIRAL' is written as '124', 'VIDEO' is written as '110'. What is the code for 'CLAIM' in that code language?

- Ans
- 1. 72
 - 2. 78
 - 3. 74
 - 4. 76

Question ID : 630680440769
 Option 1 ID : 6306801720736
 Option 2 ID : 6306801720735
 Option 3 ID : 6306801720737
 Option 4 ID : 6306801720734
 Status : Answered
 Chosen Option : 4

Q.13 Two figures given on the left side of (::) are related with some logic/rule/relation. Select the missing figure/figure pair on the right side of (::) from the given alternatives based on the same logic/rule/relation.



Ans

- 1.
- 2.
- 3.
- 4.

Question ID : 630680440784
 Option 1 ID : 6306801720795
 Option 2 ID : 6306801720796
 Option 3 ID : 6306801720794
 Option 4 ID : 6306801720797
 Status : Answered
 Chosen Option : 4

Q.14 What is the approximate value of $(16.009)^2 \times (3.89) + 2204.7 - 29$?

- Ans
- 1. 2960
 - 2. 3100
 - 3. 3200
 - 4. 3505

Question ID : 630680440789
Option 1 ID : 6306801720815
Option 2 ID : 6306801720814
Option 3 ID : 6306801720816
Option 4 ID : 6306801720817
Status : Answered
Chosen Option : 3

Q.15 Eight persons A1, A2, A3, A4, A5, A6, A7 and A8 live in an eight storied building, one on each floor but not necessarily in the same order. The lowermost floor is numbered 1, and the floor above it is numbered 2 and so on. Only two persons live below the floor on which A7 lives. Only one person lives between A7 and A1. A8 lives on an odd numbered floor but not on floor number 7. Only two persons live between A8 and A2. A2 does not live on the topmost floor. A1 does not live on the lowermost floor. A4 lives immediately below A3. Neither A4 nor A5 lives on floor numbered 6. Who lives immediately below A6?

- Ans
- 1. A5
 - 2. A4
 - 3. A1
 - 4. A7

Question ID : 630680440765
Option 1 ID : 6306801720718
Option 2 ID : 6306801720719
Option 3 ID : 6306801720720
Option 4 ID : 6306801720721
Status : Not Attempted and Marked For Review
Chosen Option : --

Q.16 In a certain code language, 'DIGEST' is written as 'IBLXXM'. What is the code for 'HELIUM' in that code language?

- Ans
- 1. MYQBZF
 - 2. MXQAZF
 - 3. MXQBZD
 - 4. MXQBZF

Question ID : 630680440768
Option 1 ID : 6306801720732
Option 2 ID : 6306801720733
Option 3 ID : 6306801720730
Option 4 ID : 6306801720731
Status : Answered
Chosen Option : 4





Q.17 In the following question, select the missing number from the given series.
691, 670, 648, 625, 601, ?

- Ans 1. 576
 2. 580
 3. 577
 4. 574

Question ID : 630680440791
 Option 1 ID : 6306801720823
 Option 2 ID : 6306801720824
 Option 3 ID : 6306801720825
 Option 4 ID : 6306801720822
 Status : Answered
 Chosen Option : 1

Q.18 In the following question, select the odd figure from the given alternatives.

Ans

1. 
2. 
3. 
4. 

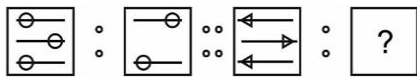
Question ID : 630680440782
 Option 1 ID : 6306801720789
 Option 2 ID : 6306801720788
 Option 3 ID : 6306801720786
 Option 4 ID : 6306801720787
 Status : Answered
 Chosen Option : 4

Q.19 In the following question, select the missing number from the given series.
3, 9, 54, 486, 5832, ?

- Ans 1. 87480
 2. 8100
 3. 8320
 4. 85000

Question ID : 630680440792
 Option 1 ID : 6306801720826
 Option 2 ID : 6306801720828
 Option 3 ID : 6306801720829
 Option 4 ID : 6306801720827
 Status : Answered
 Chosen Option : 1

Q.20 Two figures given on the left side of (::) are related with some logic/rule/relation. Select the missing figure/figure pair on the right side of (::) from the given alternatives based on the same logic/rule/relation.



Ans

- 1.
- 2.
- 3.
- 4.

Question ID : 630680440785
 Option 1 ID : 6306801720798
 Option 2 ID : 6306801720801
 Option 3 ID : 6306801720799
 Option 4 ID : 6306801720800
 Status : Answered
 Chosen Option : 1

Q.21 In a certain code language, 'MAKERS' is written as 'KAMSRE'. What is the code for 'HEADER' in that code language?

- Ans
- 1. AEHDER
 - 2. AEHERD
 - 3. AHERER
 - 4. AEHRED

Question ID : 630680440767
Option 1 ID : 6306801720727
Option 2 ID : 6306801720728
Option 3 ID : 6306801720729
Option 4 ID : 6306801720726
Status : Answered
Chosen Option : 4

Q.22 In the following question below are given some statements followed by some conclusions based on those statements. Taking the given statements to be true even if they seem to be at variance from commonly known facts. Read all the conclusions and then decide which of the given conclusion logically follows the given statements.

Statements:

- I. Some tuition are battery.
- II. All tuition are teacher.

Conclusion:

- I. All teacher are tuition.
- II. All battery are tuition.
- III. All battery are teacher.

- Ans
- 1. Neither conclusion follows
 - 2. All conclusion follows
 - 3. Both conclusions II and III follows
 - 4. Both conclusions I and III follows

Question ID : 630680440770
Option 1 ID : 6306801720739
Option 2 ID : 6306801720738
Option 3 ID : 6306801720741
Option 4 ID : 6306801720740
Status : Answered
Chosen Option : 1

Q.23 In the following question, select the related letters from the given alternatives.
LRS : HZD :: UZO : ?

- Ans
- 1. BQC
 - 2. ONN
 - 3. SPP
 - 4. QHZ

Question ID : 630680440775
Option 1 ID : 6306801720761
Option 2 ID : 6306801720759
Option 3 ID : 6306801720760
Option 4 ID : 6306801720758
Status : Answered
Chosen Option : 4

Q.24 Which figure is similar to the given figures?



Ans

✓ 1.



✗ 2.



✗ 3.



✗ 4.



Question ID : 630680440783

Option 1 ID : 6306801720790

Option 2 ID : 6306801720792

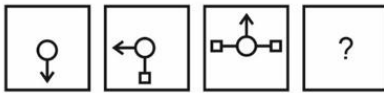
Option 3 ID : 6306801720791

Option 4 ID : 6306801720793

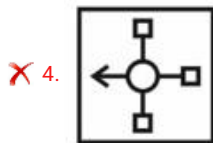
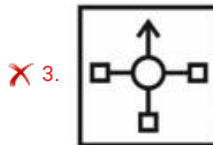
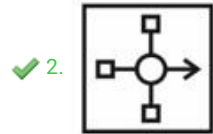
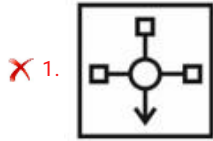
Status : Answered

Chosen Option : 1

Q.25 In the following question, select the figure which can be placed at the sign of question mark (?) from the given alternatives.



Ans



Question ID : 630680440778
 Option 1 ID : 6306801720772
 Option 2 ID : 6306801720770
 Option 3 ID : 6306801720773
 Option 4 ID : 6306801720771
 Status : Answered
 Chosen Option : 2

Q.26 Pointing towards a woman in a photograph, a man said, "Her brother's sister is the sister of the sister of my son". How is that woman related to that man's wife?

- Ans
- ✗ 1. Sister
 - ✗ 2. Sister-in-law
 - ✓ 3. Daughter
 - ✗ 4. Daughter-in-law

Question ID : 630680440772
 Option 1 ID : 6306801720747
 Option 2 ID : 6306801720746
 Option 3 ID : 6306801720749
 Option 4 ID : 6306801720748
 Status : Answered
 Chosen Option : 3

Q.27 In the following question below are given some statements followed by some conclusions based on those statements. Taking the given statements to be true even if they seem to be at variance from commonly known facts. Read all the conclusions and then decide which of the given conclusion logically follows the given statements.

Statements:

I. Some A are B.

II. No B is C.

III. No C is D.

Conclusion:

I. Some A are D.

II. Some A are not C.

III. No B is D.

Ans 1. Only conclusion II follows

2. Only conclusion III follows

3. Only conclusion I follows

4. Neither conclusion follows

Question ID : 630680440771

Option 1 ID : 6306801720743

Option 2 ID : 6306801720744

Option 3 ID : 6306801720742

Option 4 ID : 6306801720745

Status : Answered

Chosen Option : 4

Q.28 What is the approximate value of $3184.97 \div 4.95 + 3.2 \times 8.1$?

Ans 1. 582

2. 660

3. 731

4. 603

Question ID : 630680440790

Option 1 ID : 6306801720819

Option 2 ID : 6306801720820

Option 3 ID : 6306801720818

Option 4 ID : 6306801720821

Status : Answered

Chosen Option : 2

Q.29 In the following question, select the missing number from the given series.
30, 30, 33, 41, 56, ?

Ans 1. 78

2. 80

3. 64

4. 84

Question ID : 630680440793

Option 1 ID : 6306801720833

Option 2 ID : 6306801720830

Option 3 ID : 6306801720831

Option 4 ID : 6306801720832

Status : Answered

Chosen Option : 2

Q.30 'A + B' means 'A is the daughter of B', 'A × B' means 'A is the husband of B', 'A ÷ B' means 'A is the father of B' and 'A - B' means 'A is the wife of B'. If $K - S \div J \times B + C - Q$, then How is J related to B?

- Ans
- 1. Son
 - 2. Husband
 - 3. Daughter
 - 4. Wife

Question ID : 630680440773
 Option 1 ID : 6306801720752
 Option 2 ID : 6306801720750
 Option 3 ID : 6306801720753
 Option 4 ID : 6306801720751
 Status : Answered
 Chosen Option : 2

Section : General Awareness

Q.1 किसी वस्तु के लिए यदि एक उपभोक्ता की मांग उसी दिशा में गति करती है, जिस दिशा में उपभोक्ता की आय, तो यह _____ है।

- Ans
- 1. गिफिन वस्तु
 - 2. क्लब वस्तु
 - 3. निम्नस्तरीय वस्तु
 - 4. सामान्य वस्तु

Question ID : 630680440811
 Option 1 ID : 6306801720905
 Option 2 ID : 6306801720902
 Option 3 ID : 6306801720904
 Option 4 ID : 6306801720903
 Status : Not Answered
 Chosen Option : --

Q.2 In order to avail the benefits of Pradhan Mantri Shram Yogi Maandhan Yojana, Monthly Income should be up to Rs _____.

- Ans
- 1. 10000
 - 2. 25000
 - 3. 15000
 - 4. 20000

Question ID : 630680440798
 Option 1 ID : 6306801720850
 Option 2 ID : 6306801720853
 Option 3 ID : 6306801720851
 Option 4 ID : 6306801720852
 Status : Not Answered
 Chosen Option : --

Q.3 2011 की जनगणना के अनुसार निम्नलिखित में से कौन सा/से कथन सही है/हैं?
I. 2001-2011 के दशक में भारत की जनसंख्या वृद्धि दर 13.3 प्रतिशत थी।
II. सिख धार्मिक समुदाय की जनसंख्या भारत की कुल जनसंख्या का 1.7 प्रतिशत थी।

- Ans 1. केवल II
 2. ना ही I ना ही II
 3. केवल I
 4. I तथा II दोनों

Question ID : 630680440816
Option 1 ID : 6306801720923
Option 2 ID : 6306801720925
Option 3 ID : 6306801720922
Option 4 ID : 6306801720924
Status : Not Answered
Chosen Option : --

Q.4 मणिपुर में 'कर्तन दहन प्रणाली' कृषि को _____ कहा जाता है।

- Ans 1. पामलू
 2. दीपा
 3. मिल्पा
 4. कोनुको

Question ID : 630680440817
Option 1 ID : 6306801720929
Option 2 ID : 6306801720928
Option 3 ID : 6306801720927
Option 4 ID : 6306801720926
Status : Not Answered
Chosen Option : --

Q.5 Annual turnover should be below _____, in order to avail the benefits of the National Pension Scheme for Traders and Self-Employed Persons (NPS-Traders) 2019.

- Ans 1. Rs. 2.5 crore
 2. Rs. 50 lakh
 3. Rs. 1 crore
 4. Rs. 1.5 crore

Question ID : 630680440799
Option 1 ID : 6306801720857
Option 2 ID : 6306801720854
Option 3 ID : 6306801720855
Option 4 ID : 6306801720856
Status : Not Answered
Chosen Option : --

Q.6 नकद कोष अनुपात (CRR) को _____ भी कहा जाता है।

I. आवश्यक कोष अनुपात

II. कोष अनुपात

- Ans
- 1. केवल II
 - 2. ना ही I ना ही II
 - 3. केवल I
 - 4. I तथा II दोनों

Question ID : 630680440810

Option 1 ID : 6306801720899

Option 2 ID : 6306801720901

Option 3 ID : 6306801720898

Option 4 ID : 6306801720900

Status : Answered

Chosen Option : 3

Q.7 As per Economic Survey 2020-21, what was the per capita income of Bihar for 2018-19?

- Ans
- 1. Rs. 40,982 per annum
 - 2. Rs. 80,982 per annum
 - 3. Rs. 1,80,982 per annum
 - 4. Rs. 1,40,982 per annum

Question ID : 630680440806

Option 1 ID : 6306801720882

Option 2 ID : 6306801720883

Option 3 ID : 6306801720885

Option 4 ID : 6306801720884

Status : Not Answered

Chosen Option : --

Q.8 चंगेज़ खान के संबंध में निम्नलिखित में से कौन सा/से कथन सही है/हैं?

I. वह एक मंगोल शासक था जो चीन और मध्य एशिया के कुछ भागों पर राज करता था।

II. उसकी मृत्यु 1404 में हुई।

- Ans
- 1. केवल II
 - 2. केवल I
 - 3. ना ही I ना ही II
 - 4. I तथा II दोनों

Question ID : 630680440803

Option 1 ID : 6306801720871

Option 2 ID : 6306801720870

Option 3 ID : 6306801720873

Option 4 ID : 6306801720872

Status : Answered

Chosen Option : 4

Q.9 बंगाल का विभाजन _____ में हुआ था।

- Ans
- 1. 1915
 - 2. 1901
 - 3. 1905
 - 4. 1911

Question ID : 630680440800
 Option 1 ID : 6306801720861
 Option 2 ID : 6306801720858
 Option 3 ID : 6306801720859
 Option 4 ID : 6306801720860
 Status : Answered
 Chosen Option : 3

Q.10 भारत में 19वीं शताब्दी के सामाजिक सुधार आंदोलनों के संदर्भ में 'सुधार संगठन - संस्थापक' का निम्नलिखित में से कौन सा/से युग्म सही सुमेलित है/हैं?
 I. सत्यशोधक समाज - ईश्वरचंद्र विद्यासागर
 II. स्वाभिमान आंदोलन - ई.वी. रामास्वामी नायकर

- Ans
- 1. केवल I
 - 2. केवल II
 - 3. I तथा II दोनों
 - 4. ना ही I ना ही II

Question ID : 630680440801
 Option 1 ID : 6306801720862
 Option 2 ID : 6306801720863
 Option 3 ID : 6306801720864
 Option 4 ID : 6306801720865
 Status : Not Answered
 Chosen Option : --

Q.11 कीमत रेखा _____ के बीच संबंध को दर्शाती है।

- Ans
- 1. बाज़ार कीमत तथा एक फर्म के निर्गत स्तर
 - 2. औसत लागत और एक फर्म के निर्गत स्तर
 - 3. विक्रय मूल्य तथा एक फर्म के निर्गत स्तर
 - 4. बाज़ार कीमत तथा विक्रय मूल्य

Question ID : 630680440809
 Option 1 ID : 6306801720895
 Option 2 ID : 6306801720894
 Option 3 ID : 6306801720896
 Option 4 ID : 6306801720897
 Status : Answered
 Chosen Option : 2

Q.12 _____ is observed a day before Deepawali in the month of Kartika

- Ans 1. Kali Puja
 2. Ganesh Puja
 3. Laxmi Puja
 4. Durga Puja

Question ID : 630680440822
 Option 1 ID : 6306801720947
 Option 2 ID : 6306801720949
 Option 3 ID : 6306801720946
 Option 4 ID : 6306801720948
 Status : Answered
 Chosen Option : 3

Q.13 निम्नलिखित में से कौन सा मौद्रिक नीति उपकरण भारत औसत कॉल मनी दर में दैनिक संचलन के लिए कॉरिडर निर्धारित करता है?

- I. बैंक दर
 II. रिवर्स रेपो दर
 III. सीमांत स्थायी सुविधा दर

- Ans 1. I, II तथा III
 2. II तथा III
 3. I तथा II
 4. केवल I

Question ID : 630680440812
 Option 1 ID : 6306801720908
 Option 2 ID : 6306801720907
 Option 3 ID : 6306801720906
 Option 4 ID : 6306801720909
 Status : Answered
 Chosen Option : 3

Q.14 कथक नृत्य के संदर्भ में निम्नलिखित में से कौन सा/से कथन सही है/हैं?

- I. यह भारत के शास्त्रीय नृत्यों में से एक है।
 II. यह केरल की पारंपरिक नृत्य शैलियों में से एक है।

- Ans 1. केवल II
 2. ना ही I ना ही II
 3. केवल I
 4. I तथा II दोनों

Question ID : 630680440821
 Option 1 ID : 6306801720943
 Option 2 ID : 6306801720945
 Option 3 ID : 6306801720942
 Option 4 ID : 6306801720944
 Status : Not Answered
 Chosen Option : --

Q.15 The largest inhabited riverine island in the world is located in the _____ river.

- Ans
- 1. Ganga
 - 2. Narmada
 - 3. Brahmaputra
 - 4. Indus

Question ID : 630680440814
Option 1 ID : 6306801720915
Option 2 ID : 6306801720916
Option 3 ID : 6306801720917
Option 4 ID : 6306801720914
Status : Answered
Chosen Option : 3

Q.16 Which Indian state launched the Amrit Brikshya Andolan initiative in September 2023?

- Ans
- 1. Odisha
 - 2. Kerala
 - 3. Assam
 - 4. Gujarat

Question ID : 630680440794
Option 1 ID : 6306801720836
Option 2 ID : 6306801720835
Option 3 ID : 6306801720834
Option 4 ID : 6306801720837
Status : Answered
Chosen Option : 2

Q.17 2015 में सभी संयुक्त राष्ट्र सदस्य देशों द्वारा अपनाए गए सतत विकास के लिए एजेंडा 2030 के संदर्भ में निम्नलिखित में से कौन सा/से कथन सही है/हैं?
I. इसमें 17 सतत विकास लक्ष्य (एसडीजी) हैं।
II. इसमें 169 टारगेट हैं।

- Ans
- 1. केवल I
 - 2. केवल II
 - 3. I तथा II दोनों
 - 4. ना ही I ना ही II

Question ID : 630680440795
Option 1 ID : 6306801720838
Option 2 ID : 6306801720839
Option 3 ID : 6306801720840
Option 4 ID : 6306801720841
Status : Not Answered
Chosen Option : --

Q.18 'कुटुंब श्री' महिलाओं की ओर उन्मुख एक निर्धनता निवारक सामुदायिक कार्यक्रम है जिसे _____ प्रांत में चलाया जा रहा है।

- Ans
- 1. हरियाणा
 - 2. केरल
 - 3. गुजरात
 - 4. ओडिशा

Question ID : 630680440808
 Option 1 ID : 6306801720891
 Option 2 ID : 6306801720892
 Option 3 ID : 6306801720890
 Option 4 ID : 6306801720893
 Status : Answered
 Chosen Option : 2

Q.19 भारत में निम्नलिखित में से किस जनजाति द्वारा मोपिन उत्सव मनाया जाता है?

- Ans
- 1. सिंगपो
 - 2. खाम्ती
 - 3. वांचो
 - 4. गालो

Question ID : 630680440823
 Option 1 ID : 6306801720950
 Option 2 ID : 6306801720952
 Option 3 ID : 6306801720953
 Option 4 ID : 6306801720951
 Status : Not Answered
 Chosen Option : --

Q.20 वर्ष 2010 में _____ नृत्य को 'यूनेस्को धरोहर' नृत्यों में शामिल किया गया।

- Ans
- 1. पैका
 - 2. छौ
 - 3. मुंडारी
 - 4. सत्रीय

Question ID : 630680440820
 Option 1 ID : 6306801720938
 Option 2 ID : 6306801720939
 Option 3 ID : 6306801720940
 Option 4 ID : 6306801720941
 Status : Not Answered
 Chosen Option : --

Q.21 भारत की जलवायु के संदर्भ में निम्नलिखित में से कौन सा/से कथन सही है/हैं?
I. भारत की जलवायु को मानसूनी जलवायु कहा जाता है।
II. भारत की जलवायु में उष्ण कटिबंधीय जलवायु एवं उपोष्ण कटिबंधीय जलवायु दोनों की विशेषताएं उपस्थित हैं।

- Ans
- 1. केवल II
 - 2. ना ही I ना ही II
 - 3. I तथा II दोनों
 - 4. केवल I

Question ID : 630680440815
Option 1 ID : 6306801720919
Option 2 ID : 6306801720921
Option 3 ID : 6306801720920
Option 4 ID : 6306801720918
Status : Not Answered
Chosen Option : --

Q.22 Kalinga is the ancient name of _____.

- Ans
- 1. coastal Orissa
 - 2. Bengal
 - 3. Bihar
 - 4. coastal Kerala

Question ID : 630680440804
Option 1 ID : 6306801720877
Option 2 ID : 6306801720875
Option 3 ID : 6306801720874
Option 4 ID : 6306801720876
Status : Answered
Chosen Option : 2

Q.23 निम्नलिखित में से किसे सामान्यतः असमी साहित्य की सबसे पहली लिखित कृति माना जाता है?

- Ans
- 1. चर्यागीति
 - 2. मृगावती चरित
 - 3. दोहाकोश
 - 4. प्रह्लादचरित्र

Question ID : 630680440819
Option 1 ID : 6306801720935
Option 2 ID : 6306801720934
Option 3 ID : 6306801720936
Option 4 ID : 6306801720937
Status : Not Answered
Chosen Option : --

Q.24 Which of the following statements is/are correct in the context of the Lunar Polar Exploration Mission (LUPEX)?
I. It is a collaborative venture between NASA and ISRO.
II. The mission, among others, is aimed at exploring lunar polar region suitability for establishing a base on the Moon for sustainable activities.

- Ans 1. Only II
 2. Both I and II
 3. Neither I nor II
 4. Only I

Question ID : 630680440797
Option 1 ID : 6306801720847
Option 2 ID : 6306801720848
Option 3 ID : 6306801720849
Option 4 ID : 6306801720846
Status : Answered
Chosen Option : 4

Q.25 The National Bank for Agriculture and Rural Development (NABARD) was set up in

- Ans 1. 1972
 2. 1976
 3. 1982
 4. 1986

Question ID : 630680440807
Option 1 ID : 6306801720886
Option 2 ID : 6306801720887
Option 3 ID : 6306801720888
Option 4 ID : 6306801720889
Status : Not Answered
Chosen Option : --

Q.26 The launch of Aditya-L1 was accomplished successfully on _____, 2023.

- Ans 1. August 2
 2. September 2
 3. August 23
 4. September 23

Question ID : 630680440796
Option 1 ID : 6306801720842
Option 2 ID : 6306801720844
Option 3 ID : 6306801720843
Option 4 ID : 6306801720845
Status : Answered
Chosen Option : 3

Q.27 Which of the following statements is/are correct about emperor Ashoka?

- I. He was a ruler belonging to the Gupta dynasty.
II. He was the son of Bindusara.

- Ans 1. Only II
 2. Neither I nor II
 3. Only I
 4. Both I and II

Question ID : 630680440805
Option 1 ID : 6306801720879
Option 2 ID : 6306801720881
Option 3 ID : 6306801720878
Option 4 ID : 6306801720880
Status : Not Answered
Chosen Option : --

Q.28 The dry deciduous forests are found in areas having rainfall between _____.

- Ans 1. 100 cm to 200 cm
 2. 200 cm to 300 cm
 3. 70 cm to 100 cm
 4. 20 cm to 70 cm

Question ID : 630680440813
Option 1 ID : 6306801720910
Option 2 ID : 6306801720912
Option 3 ID : 6306801720911
Option 4 ID : 6306801720913
Status : Not Answered
Chosen Option : --

Q.29 तीन राजवंशों के शासक सदियों तक कनौज के ऊपर नियंत्रण को लेकर आपस में लड़ते रहे। निम्नलिखित में से कौन सा वंश इस 'त्रिपक्षीय संघर्ष' में शामिल नहीं था?

- Ans 1. पाल
 2. राष्ट्रकूट
 3. चोल
 4. गुर्जर-प्रतिहार

Question ID : 630680440802
Option 1 ID : 6306801720868
Option 2 ID : 6306801720867
Option 3 ID : 6306801720869
Option 4 ID : 6306801720866
Status : Answered
Chosen Option : 1

Q.30 Which of the following statements is/are correct regarding Sardar Sarovar Dam?

I. This Dam has been built over the Narmada River.

II. This project covers four states – Maharashtra, Madhya Pradesh, Gujarat and Rajasthan.

Ans 1. Both I and II

2. Only I

3. Neither I nor II

4. Only II

Question ID : 630680440818

Option 1 ID : 6306801720932

Option 2 ID : 6306801720930

Option 3 ID : 6306801720933

Option 4 ID : 6306801720931

Status : Not Answered

Chosen Option : --

Section : Quantitative Aptitude

Q.1 A sphere is melted to form a cylinder. If the height of the cylinder is $\frac{256}{81}$ times of its own radius, then what is the ratio of the radius of sphere to the radius of cylinder?

Ans 1. 3 : 4

2. 2 : 1

3. 1 : 1

4. 4 : 3

Question ID : 630680440849

Option 1 ID : 6306801721054

Option 2 ID : 6306801721057

Option 3 ID : 6306801721056

Option 4 ID : 6306801721055

Status : Answered

Chosen Option : 4

Q.2 The compound interest (compounding half yearly) received on Rs. 6000 for 1.5 years is Rs. 1986 What is the rate of interest per annum?

Ans 1. 20 percent

2. 25 percent

3. 40 percent

4. 30 percent

Question ID : 630680440841

Option 1 ID : 6306801721022

Option 2 ID : 6306801721023

Option 3 ID : 6306801721025

Option 4 ID : 6306801721024

Status : Answered

Chosen Option : 4

Q.3 If the Sum of all the interior angles of a polygon is 1080, then what is the number of sides in the polygon?

- Ans
- 1. 8
 - 2. 9
 - 3. 6
 - 4. 5

Question ID : 630680440852
 Option 1 ID : 6306801721068
 Option 2 ID : 6306801721069
 Option 3 ID : 6306801721067
 Option 4 ID : 6306801721066
 Status : Answered
 Chosen Option : 3

Q.4 If the side of a square increases by c percent, then area of the square increases by 69 percent. What is the value of c?

- Ans
- 1. 25 percent
 - 2. 50 percent
 - 3. 35 percent
 - 4. 30 percent

Question ID : 630680440831
 Option 1 ID : 6306801720982
 Option 2 ID : 6306801720983
 Option 3 ID : 6306801720985
 Option 4 ID : 6306801720984
 Status : Not Answered
 Chosen Option : --

Q.5 What is the value of $\frac{1}{3 \times 5} + \frac{1}{5 \times 7} + \frac{1}{7 \times 9} + \dots + \frac{1}{37 \times 39}$?

- Ans
- 1. $\frac{6}{39}$
 - 2. $\frac{12}{39}$
 - 3. $\frac{38}{39}$
 - 4. $\frac{1}{39}$

Question ID : 630680440825
 Option 1 ID : 6306801720959
 Option 2 ID : 6306801720960
 Option 3 ID : 6306801720961
 Option 4 ID : 6306801720958
 Status : Answered
 Chosen Option : 2

Q.6 Radius of a circle is 20 cm. What will be the angle made by a chord of length 40 cm on the circumference of this circle?

- Ans
- 1. 140 degrees
 - 2. 120 degrees
 - 3. 90 degrees
 - 4. 135 degrees

Question ID : 630680440850
Option 1 ID : 6306801721059
Option 2 ID : 6306801721061
Option 3 ID : 6306801721058
Option 4 ID : 6306801721060
Status : Answered
Chosen Option : 3

Q.7 Selling price of an article is Rs. 6650 and discount of 30 percent is offered. What is the marked price of the article?

- Ans
- 1. Rs. 8500
 - 2. Rs. 9500
 - 3. Rs. 9800
 - 4. Rs. 9600

Question ID : 630680440834
Option 1 ID : 6306801720995
Option 2 ID : 6306801720997
Option 3 ID : 6306801720994
Option 4 ID : 6306801720996
Status : Answered
Chosen Option : 2

Q.8 70 percent of 10 percent of a number is equal to 343. What is the 27 percent of that number?

- Ans
- 1. 1333
 - 2. 1323
 - 3. 1023
 - 4. 1233

Question ID : 630680440830
Option 1 ID : 6306801720979
Option 2 ID : 6306801720978
Option 3 ID : 6306801720981
Option 4 ID : 6306801720980
Status : Answered
Chosen Option : 2

Q.9 A certain sum of money becomes triple of itself in 6 years at simple interest. In how many years it will becomes five times of itself?

- Ans
- 1. 7 years
 - 2. 12 years
 - 3. 16 years
 - 4. 10 years

Question ID : 630680440838
Option 1 ID : 6306801721010
Option 2 ID : 6306801721012
Option 3 ID : 6306801721013
Option 4 ID : 6306801721011
Status : Answered
Chosen Option : 4

Q.10 Mixture of milk and water in three bottles of equal capacity is in the ratio 4 : 5, 3 : 1 and 2 : 1 respectively. These three bottles are emptied into a large bottle. What will be the ratio of milk and water respectively in the large bottle?

- Ans
- 1. 67 : 41
 - 2. 67 : 39
 - 3. 67 : 42
 - 4. 67 : 40

Question ID : 630680440837
Option 1 ID : 6306801721008
Option 2 ID : 6306801721007
Option 3 ID : 6306801721009
Option 4 ID : 6306801721006
Status : Answered
Chosen Option : 1

Q.11 A 4 digit number which when divide by 12, 16 and 18 leaves 7 as remainder in each case. Find the smallest such number.

- Ans
- 1. 1015
 - 2. 1024
 - 3. 1440
 - 4. 3628

Question ID : 630680440826
Option 1 ID : 6306801720965
Option 2 ID : 6306801720962
Option 3 ID : 6306801720963
Option 4 ID : 6306801720964
Status : Answered
Chosen Option : 1

Q.12 In how much time will a sum of Rs. 3200 amounts to Rs. 7040 at the rate of 6 percent per annum at simple interest?

- Ans
- 1. 27 years
 - 2. 32 years
 - 3. 20 years
 - 4. 25 years

Question ID : 630680440839
Option 1 ID : 6306801721016
Option 2 ID : 6306801721017
Option 3 ID : 6306801721014
Option 4 ID : 6306801721015
Status : Answered
Chosen Option : 3

Q.13 A work can be completed by 15 boys in 48 days. If 9 boys leave after working for 24 days, then how many days will be needed to complete the remaining work?

- Ans
- 1. 60 days
 - 2. 94 days
 - 3. 87 days
 - 4. 90 days

Question ID : 630680440844
Option 1 ID : 6306801721034
Option 2 ID : 6306801721036
Option 3 ID : 6306801721037
Option 4 ID : 6306801721035
Status : Not Answered
Chosen Option : --

Q.14 A person earns a profit of 30 percent by selling a chair for Rs. 208. How much percent should he increase his selling price to earn a profit of 50 percent?

- Ans
- 1. 14.28 percent
 - 2. 16.66 percent
 - 3. 20 percent
 - 4. 15.38 percent

Question ID : 630680440833
Option 1 ID : 6306801720991
Option 2 ID : 6306801720990
Option 3 ID : 6306801720993
Option 4 ID : 6306801720992
Status : Answered
Chosen Option : 4

Q.15 Median of the numbers 2, 7, 5, 12, 12 and P is 8.5. What is the value of P?

- Ans
- 1. 10.5
 - 2. 11
 - 3. 9.5
 - 4. 10

Question ID : 630680440845
Option 1 ID : 6306801721041
Option 2 ID : 6306801721039
Option 3 ID : 6306801721038
Option 4 ID : 6306801721040
Status : Answered
Chosen Option : 4

Q.16 Average age of 13 students of a school is 24 years. The average age of these students and their mathematics and science teachers is 36 years. If the age of science teacher is 16 years more than the age of mathematics teacher, then what is the age of mathematics teacher?

- Ans
- 1. 108 years
 - 2. 107 years
 - 3. 105.5 years
 - 4. 106 years

Question ID : 630680440829
Option 1 ID : 6306801720977
Option 2 ID : 6306801720976
Option 3 ID : 6306801720974
Option 4 ID : 6306801720975
Status : Not Answered
Chosen Option : --

Q.17 What is the total surface area of a cone whose radius is 12 cm and height is 16 cm?

- Ans
- 1. 1429.72 cm²
 - 2. 1678.65 cm²
 - 3. 1028.54 cm²
 - 4. 1206.86 cm²

Question ID : 630680440848
Option 1 ID : 6306801721051
Option 2 ID : 6306801721053
Option 3 ID : 6306801721052
Option 4 ID : 6306801721050
Status : Answered
Chosen Option : 4

Q.18 The average age of 8 members of a family is 34 years. If the youngest member is 7 years old, then what was the average age of the family just before the birth of the youngest member?

- Ans
- 1. 30.28 years
 - 2. 31.29 years
 - 3. 32 years
 - 4. 30.86 years

Question ID : 630680440828
Option 1 ID : 6306801720972
Option 2 ID : 6306801720973
Option 3 ID : 6306801720970
Option 4 ID : 6306801720971
Status : Not Answered
Chosen Option : --

Q.19 Average of 13 numbers is 20. If a number is removed, then the average becomes 17. Which number was removed?

- Ans
- 1. 60
 - 2. 36
 - 3. 56
 - 4. 38

Question ID : 630680440827
Option 1 ID : 6306801720969
Option 2 ID : 6306801720966
Option 3 ID : 6306801720968
Option 4 ID : 6306801720967
Status : Answered
Chosen Option : 3

Q.20 The ratio of salary of A, B and C is 9 : 7 : 17. If C gets Rs. 4000 more than B, then what is the salary of A?

- Ans
- 1. Rs. 3600
 - 2. Rs. 4000
 - 3. Rs. 6300
 - 4. Rs. 2800

Question ID : 630680440835
Option 1 ID : 6306801721000
Option 2 ID : 6306801721001
Option 3 ID : 6306801720998
Option 4 ID : 6306801720999
Status : Answered
Chosen Option : 1

Q.21 How many diagonals are there in a regular hexagon?

- Ans
- 1. 10
 - 2. 9
 - 3. 12
 - 4. 15

Question ID : 630680440851
Option 1 ID : 6306801721063
Option 2 ID : 6306801721062
Option 3 ID : 6306801721064
Option 4 ID : 6306801721065
Status : Answered
Chosen Option : 2

Q.22 The speed of a bus is 126 km/hr. What will be the distance covered by the bus in 20 seconds?

- Ans
- 1. 700 metres
 - 2. 900 metres
 - 3. 600 metres
 - 4. 800 metres

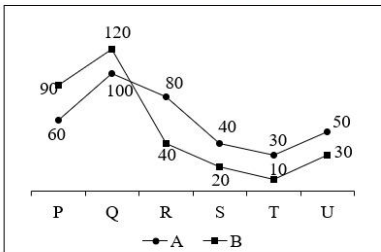
Question ID : 630680440842
Option 1 ID : 6306801721027
Option 2 ID : 6306801721029
Option 3 ID : 6306801721026
Option 4 ID : 6306801721028
Status : Answered
Chosen Option : 1

Q.23 How much amount will be received on a principal of Rs. 20000 at the rate of 30 percent per annum compounded annually for 2 years?

- Ans
- 1. Rs. 32910
 - 2. Rs. 33700
 - 3. Rs. 33800
 - 4. Rs. 35020

Question ID : 630680440840
 Option 1 ID : 6306801721019
 Option 2 ID : 6306801721018
 Option 3 ID : 6306801721020
 Option 4 ID : 6306801721021
 Status : Answered
 Chosen Option : 3

Q.24 The line chart given below shows the production of wheat by two companies in 6 years (P, Q, R, S, T and U).



What are the ratio of production of wheat by both companies in year P to the production of wheat by both companies in year Q?

- Ans
- 1. 16 : 23
 - 2. 22 : 17
 - 3. 22 : 15
 - 4. 15 : 22

Question ID : 630680440846
 Option 1 ID : 6306801721043
 Option 2 ID : 6306801721045
 Option 3 ID : 6306801721042
 Option 4 ID : 6306801721044
 Status : Answered
 Chosen Option : 4

Q.25 Total number of a ball in a bag is 40. The number of red balls are 6 more than the number of yellow balls. What will be the number of red ball?

- Ans
- 1. 25
 - 2. 26
 - 3. 27
 - 4. 23

Question ID : 630680440847
 Option 1 ID : 6306801721047
 Option 2 ID : 6306801721049
 Option 3 ID : 6306801721048
 Option 4 ID : 6306801721046
 Status : Answered
 Chosen Option : 4

Q.26 A man starts running from a point at the speed of 32 km/hr at 6:00 am. Two hours later another man starts running in the same direction from the same point at the speed of 48 km/hr. At what time will the second man be 72 km ahead of the first man?

- Ans
- 1. 4:30 pm
 - 2. 5:45 pm
 - 3. 4:15 pm
 - 4. 3:30 pm

Question ID : 630680440843
 Option 1 ID : 6306801721030
 Option 2 ID : 6306801721031
 Option 3 ID : 6306801721032
 Option 4 ID : 6306801721033
 Status : Not Answered
 Chosen Option : --

Q.27

If $\tan\theta = 10$, then what will be the value of $\frac{\cos\theta - \sin\theta}{\cos\theta + \sin\theta}$?

- Ans
- 1. $\frac{9}{11}$
 - 2. $-\frac{9}{11}$
 - 3. $-\frac{9}{12}$
 - 4. $\frac{11}{12}$

Question ID : 630680440853
 Option 1 ID : 6306801721071
 Option 2 ID : 6306801721072
 Option 3 ID : 6306801721070
 Option 4 ID : 6306801721073
 Status : Answered
 Chosen Option : 2

Q.28 Rs. 8300 is divided among A, B and C in the ratio of 18/5 : 9 : 4 respectively. What is the share of C?

- Ans
- 1. Rs. 1800
 - 2. Rs. 4500
 - 3. Rs. 1000
 - 4. Rs. 2000

Question ID : 630680440836
 Option 1 ID : 6306801721003
 Option 2 ID : 6306801721004
 Option 3 ID : 6306801721005
 Option 4 ID : 6306801721002
 Status : Answered
 Chosen Option : 4

Q.29 Selling price of an article is Rs. 245. If loss percentage is 30 percent, then what is the cost price of article?

- Ans
- 1. Rs. 300
 - 2. Rs. 400
 - 3. Rs. 450
 - 4. Rs. 350

Question ID : 630680440832
Option 1 ID : 6306801720986
Option 2 ID : 6306801720987
Option 3 ID : 6306801720988
Option 4 ID : 6306801720989
Status : Answered
Chosen Option : 4

Q.30 What is the unit digit of 2137^{753} ?

- Ans
- 1. 7
 - 2. 5
 - 3. 2
 - 4. 1

Question ID : 630680440824
Option 1 ID : 6306801720956
Option 2 ID : 6306801720957
Option 3 ID : 6306801720954
Option 4 ID : 6306801720955
Status : Answered
Chosen Option : 1

Section : English Language

Q.1 Select the word from the options which is exactly opposite in meaning to the bracketed word given in the sentence below.
Its supporters are pressurizing American companies to end their (complicity) with Israeli apartheid.

- Ans
- 1. connivance
 - 2. non-involvement
 - 3. collusion
 - 4. guiltiness

Question ID : 630680440873
Option 1 ID : 6306801721152
Option 2 ID : 6306801721150
Option 3 ID : 6306801721153
Option 4 ID : 6306801721151
Status : Not Answered
Chosen Option : --

Q.2 Select the most appropriate meaning of the given proverb.
Good things come to those who wait.

- Ans 1. If things were to happen by just wishing them, even the poorest will have everything they want.
2. If you do something dangerous or adventurous, you may get harmed.
3. Overconfidence can doom even the competent.
4. Patience is often rewarded.

Question ID : 630680440868
Option 1 ID : 6306801721133
Option 2 ID : 6306801721130
Option 3 ID : 6306801721132
Option 4 ID : 6306801721131
Status : Answered
Chosen Option : 4

Q.3 In the following passage some words have been deleted. Fill in the blanks with the help of the alternatives given. Select the most appropriate option for each number. I think of the children, and for that reason I would do anything in the world to (1) _____ them, but I don't (2) _____ know how to save them. By taking them away from their father, or by leaving them with a (3) _____ father—yes, a vicious father.... Tell me, (4) _____ what...has happened, can we live together? Is that possible? Select the most appropriate option to fill in the blank No. 3.

- Ans 1. devious
2. vicious
3. corrupt
4. devilish

Question ID : 630680440862
Option 1 ID : 6306801721108
Option 2 ID : 6306801721109
Option 3 ID : 6306801721106
Option 4 ID : 6306801721107
Status : Not Answered
Chosen Option : --

Q.4 Select the word segment that substitutes (replaces) the bracketed word segment correctly and completes the sentence meaningfully. Select the option 'no correction required' if the sentence is correct as given. Winston could not (definitely remember a time) when his country had not been at war.

- Ans 1. indefinitely remember a time
2. definitely remember any time
3. inconsiderably remember a time
4. No correction required.

Question ID : 630680440856
Option 1 ID : 6306801721084
Option 2 ID : 6306801721083
Option 3 ID : 6306801721082
Option 4 ID : 6306801721085
Status : Not Answered
Chosen Option : --

Q.5 Four sentences are given, out of which three sentences have spelling errors. Choose the sentence with all correct spelt words.

- Ans
- 1. You can conclude the presentation with a comparative analysis of the companies' Balance Sheets.
 - 2. But inspiration and faith-based agenda in movies does not guarantee box office success.
 - 3. The schedule adjustment gives Maryland the chance to win three games next week.
 - 4. The previous terms hadn't included language on the formation of that committee.

Question ID : 630680440877
Option 1 ID : 6306801721168
Option 2 ID : 6306801721167
Option 3 ID : 6306801721166
Option 4 ID : 6306801721169
Status : Answered
Chosen Option : 1

Q.6 The sentence given below is divided into multiple segments. The first and last parts are given. The remaining parts of the sentence are listed in a jumbled order. Choose the option that arranges these parts in logical sequence.

I feared to go very far from the station, as we had arrived late

- A. East; the most western of splendid bridges over the Danube,
- B. which is here of noble width and depth,
- C. I had was that we were leaving the West and entering the
- D. and would start as near the correct time as possible. The impression took us among the traditions of Turkish rule.

- Ans
- 1. BDCA
 - 2. CBAD
 - 3. DCAB
 - 4. ACDB

Question ID : 630680440858
Option 1 ID : 6306801721090
Option 2 ID : 6306801721091
Option 3 ID : 6306801721093
Option 4 ID : 6306801721092
Status : Answered
Chosen Option : 4

Q.7 Select the word segment that substitutes (replaces) the bracketed word segment correctly and completes the sentence meaningfully. Select the option 'no correction required' if the sentence is correct as given.

I have sat invisible besides you (many and many a days).

- Ans
- 1. many and many of days
 - 2. many and many a day
 - 3. many and most a days
 - 4. No correction required.

Question ID : 630680440857
Option 1 ID : 6306801721088
Option 2 ID : 6306801721086
Option 3 ID : 6306801721087
Option 4 ID : 6306801721089
Status : Answered
Chosen Option : 1

Q.8 Select the most appropriate meaning of the given idiom.
A blast from the past.

- Ans
- 1. Something that evokes a sense of nostalgia.
 - 2. To be anxious suddenly.
 - 3. To choose to decrease involvement.
 - 4. To do or say something that causes you problem.

Question ID : 630680440867
Option 1 ID : 6306801721128
Option 2 ID : 6306801721127
Option 3 ID : 6306801721129
Option 4 ID : 6306801721126
Status : Answered
Chosen Option : 4

Q.9 Four sentences are given, out of which three sentences have spelling errors.
Choose the sentence with all correct spelt words.

- Ans
- 1. This cast-iron scrubber also happens to look like it could be part of a medeival suit of armour.
 - 2. I watched as each reached up to the press box, memento in hand.
 - 3. The region has only ever crossed the case rate threshold, reports the Union-Tribune.
 - 4. The constitution allows only defence personnels, right to withhold information.

Question ID : 630680440878
Option 1 ID : 6306801721172
Option 2 ID : 6306801721173
Option 3 ID : 6306801721170
Option 4 ID : 6306801721171
Status : Answered
Chosen Option : 2

Q.10 From the given option, select the correct idiom to substitute (replace) the bracketed word segment.

Shivang is (so highly intelligent) that he wins each chess match within 10 mins.

- Ans
- 1. such a dead letter
 - 2. such a vim and vigor
 - 3. such a devil in disguise
 - 4. such a brain box

Question ID : 630680440869
Option 1 ID : 6306801721136
Option 2 ID : 6306801721135
Option 3 ID : 6306801721137
Option 4 ID : 6306801721134
Status : Answered
Chosen Option : 4

Q.11 The sentence given below is divided into multiple segments. The first and last parts are given. The remaining parts of the sentence are listed in a jumbled order. Choose the option that arranges these parts in logical sequence.

Having had some time at my disposal when in London,

A. could hardly fail to have some importance in dealing

B. the books and maps in the library regarding Transylvania;

C. I had visited the British Museum, and made search among

D. it had struck me that some foreknowledge of the country with a nobleman of that country.

Ans 1. BCAD

2. ADCB

3. DCBA

4. CBDA

Question ID : 630680440859

Option 1 ID : 6306801721097

Option 2 ID : 6306801721094

Option 3 ID : 6306801721095

Option 4 ID : 6306801721096

Status : Answered

Chosen Option : 4

Q.12 Select the most appropriate synonym of the given word.
Suave

Ans 1. Urbane

2. Prodigal

3. Lament

4. Nippy

Question ID : 630680440872

Option 1 ID : 6306801721147

Option 2 ID : 6306801721146

Option 3 ID : 6306801721149

Option 4 ID : 6306801721148

Status : Not Answered

Chosen Option : --

Q.13 In the following passage some words have been deleted. Fill in the blanks with the help of the alternatives given. Select the most appropriate option for each number.
I think of the children, and for that reason I would do anything in the world to (1) _____ them, but I don't (2) _____ know how to save them. By taking them away from their father, or by leaving them with a (3) _____ father—yes, a vicious father.... Tell me, (4) _____ what...has happened, can we live together? Is that possible? Select the most appropriate option to fill in the blank No. 1.

Ans 1. keep

2. instigate

3. vent

4. save

Question ID : 630680440860

Option 1 ID : 6306801721100

Option 2 ID : 6306801721101

Option 3 ID : 6306801721098

Option 4 ID : 6306801721099

Status : Not Answered

Chosen Option : --

Q.14 Fill in the blank with the most appropriate option.
I bought oranges _____ grapes.

- Ans
- 1. and
 - 2. also
 - 3. but
 - 4. actually

Question ID : 630680440865
Option 1 ID : 6306801721118
Option 2 ID : 6306801721119
Option 3 ID : 6306801721121
Option 4 ID : 6306801721120
Status : Answered
Chosen Option : 1

Q.15 Select the word from the options which is the same in meaning to the bracketed word given in the sentence below.
His teeth were long and (snaggy), and discoloured by tobacco juice.

- Ans
- 1. cryptic
 - 2. barbed
 - 3. horrid
 - 4. jiggled

Question ID : 630680440874
Option 1 ID : 6306801721156
Option 2 ID : 6306801721157
Option 3 ID : 6306801721155
Option 4 ID : 6306801721154
Status : Answered
Chosen Option : 3

Q.16 In the following passage some words have been deleted. Fill in the blanks with the help of the alternatives given. Select the most appropriate option for each number.
I think of the children, and for that reason I would do anything in the world to (1) _____ them, but I don't (2) _____ know how to save them. By taking them away from their father, or by leaving them with a (3) _____ father—yes, a vicious father.... Tell me, (4) _____ what...has happened, can we live together? Is that possible?
Select the most appropriate option to fill in the blank No. 4.

- Ans
- 1. since
 - 2. beyond
 - 3. apparently
 - 4. after

Question ID : 630680440863
Option 1 ID : 6306801721110
Option 2 ID : 6306801721111
Option 3 ID : 6306801721113
Option 4 ID : 6306801721112
Status : Answered
Chosen Option : 3

Q.17 Fill in the blank with the most appropriate option.
'_____!' said the girl; 'but you see she don't.'

- Ans
- 1. Alas
 - 2. Ouch
 - 3. Ah
 - 4. Oops

Question ID : 630680440866
Option 1 ID : 6306801721122
Option 2 ID : 6306801721124
Option 3 ID : 6306801721125
Option 4 ID : 6306801721123
Status : Answered
Chosen Option : 1

Q.18 Select the most appropriate antonym of the given word.
Jagged

- Ans
- 1. Denticulate
 - 2. Sharp
 - 3. Continuous
 - 4. Jeopardy

Question ID : 630680440871
Option 1 ID : 6306801721142
Option 2 ID : 6306801721145
Option 3 ID : 6306801721144
Option 4 ID : 6306801721143
Status : Answered
Chosen Option : 3

Q.19 Fill in the blank with the most appropriate option.
Shivang was aware of his comrades' view of him, and _____ his liking for the life, he felt bound to keep up that reputation.

- Ans
- 1. in addition to
 - 2. despite of
 - 3. in case of
 - 4. in front of

Question ID : 630680440864
Option 1 ID : 6306801721115
Option 2 ID : 6306801721116
Option 3 ID : 6306801721114
Option 4 ID : 6306801721117
Status : Answered
Chosen Option : 3

Q.20 Select the most appropriate word for the given group of words.
The keeping and training of birds of prey.

- Ans
- 1. Apiary
 - 2. Falconry
 - 3. Aviary
 - 4. Tannery

Question ID : 630680440854
Option 1 ID : 6306801721076
Option 2 ID : 6306801721075
Option 3 ID : 6306801721074
Option 4 ID : 6306801721077
Status : Answered
Chosen Option : 1

Q.21 From the given option, select the correct proverb which matches in meaning to the sentence given below.
I know he was all praise for your business acumen, but don't take his words literally as this guy needs business from us.

- Ans
- 1. Fools rush in where angels fear to tread.
 - 2. Flattery, like perfume, should be smelled but not swallowed.
 - 3. Faults are thick where love is thin.
 - 4. Fine feathers make fine birds.

Question ID : 630680440870
Option 1 ID : 6306801721138
Option 2 ID : 6306801721141
Option 3 ID : 6306801721140
Option 4 ID : 6306801721139
Status : Answered
Chosen Option : 3

Q.22 Select the most appropriate word for the given group of words.
The use of a word sounding somewhat like the one intended but ludicrously wrong in the context.

- Ans
- 1. Allotropism
 - 2. Papism
 - 3. Solipsism
 - 4. Malapropism

Question ID : 630680440855
Option 1 ID : 6306801721081
Option 2 ID : 6306801721079
Option 3 ID : 6306801721078
Option 4 ID : 6306801721080
Status : Answered
Chosen Option : 3

Q.23 In the following passage some words have been deleted. Fill in the blanks with the help of the alternatives given. Select the most appropriate option for each number. I think of the children, and for that reason I would do anything in the world to (1) _____ them, but I don't (2) _____ know how to save them. By taking them away from their father, or by leaving them with a (3) _____ father—yes, a vicious father.... Tell me, (4) _____ what...has happened, can we live together? Is that possible? Select the most appropriate option to fill in the blank No. 2.

- Ans
- 1. ownself
 - 2. myself
 - 3. ourselves
 - 4. ourself

Question ID : 630680440861
Option 1 ID : 6306801721104
Option 2 ID : 6306801721102
Option 3 ID : 6306801721105
Option 4 ID : 6306801721103
Status : Answered
Chosen Option : 3

Q.24 Four words are given, out of which only one word is spelt correct. Choose the correct spelt word.

- Ans
- 1. COMMIT TMENT
 - 2. BLAT ENT
 - 3. CAPPACCINO
 - 4. ECSTASY

Question ID : 630680440876
Option 1 ID : 6306801721165
Option 2 ID : 6306801721162
Option 3 ID : 6306801721164
Option 4 ID : 6306801721163
Status : Answered
Chosen Option : 2

Q.25 Four words are given, out of which only one word is spelt correct. Choose the correct spelt word.

- Ans
- 1. EXT RAVERT
 - 2. ENT HRALL
 - 3. GAUGE
 - 4. AGING

Question ID : 630680440875
Option 1 ID : 6306801721161
Option 2 ID : 6306801721159
Option 3 ID : 6306801721160
Option 4 ID : 6306801721158
Status : Answered
Chosen Option : 3

Comprehension:

Read the given passage carefully and select the most appropriate answer to the questions that follow.

The landing of Vasco da Gama at Calicut in 1498 ... is generally regarded as the beginning of a new era in world history, especially in the relationship between Asia and Europe. Although Asia and Europe had been in commercial relations with each other since antiquity, the opening of the direct sea-relations between the two was not only the fulfilment of an old dream (according to the Greek historian, Herodotus, the Phoenicians had rounded Africa in the 6th century BC) it presaged big increase of trade between the two. This, however, was only one of the objectives of the Portuguese. For the Portuguese, the opening of a new sea-route to India would give a big blow to the Muslims, the Arabs and Turks, who were the traditional enemies of Christianity, and were posing a new threat to Europe by virtue of the growing military and naval power of the Turks. A direct sea-link with India would displace the virtual monopoly of the Arabs and Turks over the trade in eastern goods, especially spices.

SubQuestion No : 26

Q.26 Identify the structure of the passage.

- Ans 1. Compare and Contrast
 2. Cause and Effect
 3. Problem and Solution
 4. Spatial Writing

Question ID : 630680440884
 Option 1 ID : 6306801721191
 Option 2 ID : 6306801721190
 Option 3 ID : 6306801721193
 Option 4 ID : 6306801721192
 Status : Answered
 Chosen Option : 3

Comprehension:

Read the given passage carefully and select the most appropriate answer to the questions that follow.

The landing of Vasco da Gama at Calicut in 1498 ... is generally regarded as the beginning of a new era in world history, especially in the relationship between Asia and Europe. Although Asia and Europe had been in commercial relations with each other since antiquity, the opening of the direct sea-relations between the two was not only the fulfilment of an old dream (according to the Greek historian, Herodotus, the Phoenicians had rounded Africa in the 6th century BC) it presaged big increase of trade between the two. This, however, was only one of the objectives of the Portuguese. For the Portuguese, the opening of a new sea-route to India would give a big blow to the Muslims, the Arabs and Turks, who were the traditional enemies of Christianity, and were posing a new threat to Europe by virtue of the growing military and naval power of the Turks. A direct sea-link with India would displace the virtual monopoly of the Arabs and Turks over the trade in eastern goods, especially spices.

SubQuestion No : 27

Q.27 From the given options, identify the central theme of the passage.

- Ans 1. The passage describes the monopoly the Arabs had over the Indian spices.
 2. The passage narrates the history of the sea route found by Vasco Da Gama to India, & its significance.
 3. The passage describes how the Portuguese rounded African continent in 6th century BC.
 4. The passage is centred around the western powers in the 15th century.

Question ID : 630680440881
 Option 1 ID : 6306801721181
 Option 2 ID : 6306801721179
 Option 3 ID : 6306801721180
 Option 4 ID : 6306801721178
 Status : Answered
 Chosen Option : 3

Comprehension:

Read the given passage carefully and select the most appropriate answer to the questions that follow.

The landing of Vasco da Gama at Calicut in 1498 ... is generally regarded as the beginning of a new era in world history, especially in the relationship between Asia and Europe. Although Asia and Europe had been in commercial relations with each other since antiquity, the opening of the direct sea-relations between the two was not only the fulfilment of an old dream (according to the Greek historian, Herodotus, the Phoenicians had rounded Africa in the 6th century BC) it presaged big increase of trade between the two. This, however, was only one of the objectives of the Portuguese. For the Portuguese, the opening of a new sea-route to India would give a big blow to the Muslims, the Arabs and Turks, who were the traditional enemies of Christianity, and were posing a new threat to Europe by virtue of the growing military and naval power of the Turks. A direct sea-link with India would displace the virtual monopoly of the Arabs and Turks over the trade in eastern goods, especially spices.

SubQuestion No : 28

Q.28 Select the options which is the most appropriate meaning of the bracketed word given in the sentence below. '...the fulfilment of an old dream it (presaged) big increase...'

- Ans**
- 1. something that prevents other things from growing
 - 2. a landing stage
 - 3. something that is of too much importance
 - 4. something that foreshadows

Question ID : 630680440882
 Option 1 ID : 6306801721185
 Option 2 ID : 6306801721183
 Option 3 ID : 6306801721182
 Option 4 ID : 6306801721184
 Status : Answered
 Chosen Option : 3

Comprehension:

Read the given passage carefully and select the most appropriate answer to the questions that follow.

The landing of Vasco da Gama at Calicut in 1498 ... is generally regarded as the beginning of a new era in world history, especially in the relationship between Asia and Europe. Although Asia and Europe had been in commercial relations with each other since antiquity, the opening of the direct sea-relations between the two was not only the fulfilment of an old dream (according to the Greek historian, Herodotus, the Phoenicians had rounded Africa in the 6th century BC) it presaged big increase of trade between the two. This, however, was only one of the objectives of the Portuguese. For the Portuguese, the opening of a new sea-route to India would give a big blow to the Muslims, the Arabs and Turks, who were the traditional enemies of Christianity, and were posing a new threat to Europe by virtue of the growing military and naval power of the Turks. A direct sea-link with India would displace the virtual monopoly of the Arabs and Turks over the trade in eastern goods, especially spices.

SubQuestion No : 29

Q.29 Identify the correct inference that can be drawn from the passage.

- Ans**
- 1. The Muslims, the Arabs and Turks, who were the traditional allies of Christianity.
 - 2. The Portuguese wanting to reach India via sea route was a dream they had since centuries.
 - 3. Asia and Europe established commercial relations in the 15th century.
 - 4. A direct sea-link with India would create the virtual monopoly of the Arabs and Turks over trade.

Question ID : 630680440883
 Option 1 ID : 6306801721186
 Option 2 ID : 6306801721189
 Option 3 ID : 6306801721188
 Option 4 ID : 6306801721187
 Status : Answered
 Chosen Option : 3

Comprehension:

Read the given passage carefully and select the most appropriate answer to the questions that follow.

The landing of Vasco da Gama at Calicut in 1498 ... is generally regarded as the beginning of a new era in world history, especially in the relationship between Asia and Europe. Although Asia and Europe had been in commercial relations with each other since antiquity, the opening of the direct sea-relations between the two was not only the fulfilment of an old dream (according to the Greek historian, Herodotus, the Phoenicians had rounded Africa in the 6th century BC) it presaged big increase of trade between the two. This, however, was only one of the objectives of the Portuguese. For the Portuguese, the opening of a new sea-route to India would give a big blow to the Muslims, the Arabs and Turks, who were the traditional enemies of Christianity, and were posing a new threat to Europe by virtue of the growing military and naval power of the Turks. A direct sea-link with India would displace the virtual monopoly of the Arabs and Turks over the trade in eastern goods, especially spices.

SubQuestion No : 30

Q.30 From the given options, identify the suitable title for the passage.

- Ans
- 1. The Arabs & Turks
 - 2. India the Land of Black Gold
 - 3. The Portuguese
 - 4. Fulfilment of an Old Dream

Question ID : 630680440880
Option 1 ID : 6306801721176
Option 2 ID : 6306801721177
Option 3 ID : 6306801721175
Option 4 ID : 6306801721174
Status : Answered
Chosen Option : 3

Section : Material Management

Q.1 There are persistent reasons why the huge benefits of coordinated product flow have remained untapped for so long, and most of these are rooted in narrow, long-standing turf-protecting behaviour – often reinforced by HR policies that have outlived their usefulness. Which of the following is NOT among those reasons?

- Ans
- 1. Abundance of resources and expertise
 - 2. Short-term focus
 - 3. Traditional functional barriers
 - 4. Traditional boundary views

Question ID : 630680440895
Option 1 ID : 6306801721235
Option 2 ID : 6306801721237
Option 3 ID : 6306801721234
Option 4 ID : 6306801721236
Status : Answered
Chosen Option : 3

Q.2 When the agenda is given as an annexure to a notice or circulated separately, then it contains which of the following elements?

- I. The programme of business to be transacted.
- II. The day, date, time and place of meeting.

- Ans
- 1. Neither I nor II
 - 2. Both I and II
 - 3. Only II
 - 4. Only I

Question ID : 630680440889
 Option 1 ID : 6306801721213
 Option 2 ID : 6306801721212
 Option 3 ID : 6306801721211
 Option 4 ID : 6306801721210
 Status : Answered
 Chosen Option : 3

Q.3 Which of the following are the basic cost elements in transportation?

- I. Billing and collecting
- II. Terminal handling

- Ans
- 1. Both I and II
 - 2. Only I
 - 3. Only II
 - 4. Neither I nor II

Question ID : 630680440964
 Option 1 ID : 6306801721512
 Option 2 ID : 6306801721510
 Option 3 ID : 6306801721511
 Option 4 ID : 6306801721513
 Status : Answered
 Chosen Option : 3

Q.4 In the context of C_{pk} index in Process capability, match the following.

	C_{pk} value		Evaluation
I	Less than + 1	1	Unacceptable process
II	+ 1 to + 1.33	2	Marginal process
III	Greater than + 1.33	3	Acceptable process

- Ans
- 1. I-3, II-1, III-2
 - 2. I-1, II-2, III-3
 - 3. I-3, II-2, III-1
 - 4. I-2, II-1, III-3

Question ID : 630680440914
 Option 1 ID : 6306801721313
 Option 2 ID : 6306801721311
 Option 3 ID : 6306801721312
 Option 4 ID : 6306801721310
 Status : Answered
 Chosen Option : 3

Q.5 Which of the following basic materials activities can be performed well by a computer-based system?

- I. Preparation of purchase orders
- II. Maintenance of inventory records

Ans 1. Both I and II

2. Only I

3. Neither I nor II

4. Only II

Question ID : 630680440930

Option 1 ID : 6306801721376

Option 2 ID : 6306801721374

Option 3 ID : 6306801721377

Option 4 ID : 6306801721375

Status : Answered

Chosen Option : 3

Q.6 Arrange the following steps (from first to last) involved in the conversion of Management Information System from manual to that of Computer based system.

- I. System description
- II. Input documents
- III. Output documents
- IV. Programming

Ans 1. II, I, III, IV

2. I, IV, III, II

3. I, II, III, IV

4. I, III, II, IV

Question ID : 630680440929

Option 1 ID : 6306801721372

Option 2 ID : 6306801721373

Option 3 ID : 6306801721370

Option 4 ID : 6306801721371

Status : Answered

Chosen Option : 3

Q.7 Dissatisfaction of a customer may lead to_____.

- I. Legal action
- II. Discontinuing purchase

Ans 1. Both I and II

2. Neither I nor II

3. Only II

4. Only I

Question ID : 630680440900

Option 1 ID : 6306801721256

Option 2 ID : 6306801721257

Option 3 ID : 6306801721255

Option 4 ID : 6306801721254

Status : Answered

Chosen Option : 3

Q.8 "Materials should move minimum possible distances". The given statement describes which factor on which the layout of stores depends?

- Ans
- 1. Frequency of handling
 - 2. Quantity, Weights of materials
 - 3. Flow of materials
 - 4. Character of materials

Question ID : 630680440897
Option 1 ID : 6306801721244
Option 2 ID : 6306801721245
Option 3 ID : 6306801721242
Option 4 ID : 6306801721243
Status : Answered
Chosen Option : 3

Q.9 _____ means a person who has obtained a license under the Bombay Warehousing Act, 1959 for the purpose of carrying out his business of warehousing.

- Ans
- 1. Accountant
 - 2. Warehouseman
 - 3. Depositor
 - 4. Security personnel

Question ID : 630680440960
Option 1 ID : 6306801721495
Option 2 ID : 6306801721496
Option 3 ID : 6306801721494
Option 4 ID : 6306801721497
Status : Answered
Chosen Option : 3

Q.10 In the context of Materials Information Flow, which of the following information must be received by the purchasing department from the other departments of the enterprise?

- Ans
- 1. Information about materials, their substitutes, lead time etc.
 - 2. Demand forecast for planning the purchase strategies
 - 3. Information about new materials, prices, and qualities
 - 4. Information on the development in the supplier's market

Question ID : 630680440933
Option 1 ID : 6306801721388
Option 2 ID : 6306801721386
Option 3 ID : 6306801721387
Option 4 ID : 6306801721389
Status : Answered
Chosen Option : 3

Q.11 The E-shop interface which of the following features?

- I. Ease of navigation
- II. Product tree

- Ans
- 1. Only II
 - 2. Neither I nor II
 - 3. Only I
 - 4. Both I and II

Question ID : 630680440956

Option 1 ID : 6306801721479

Option 2 ID : 6306801721481

Option 3 ID : 6306801721478

Option 4 ID : 6306801721480

Status : Answered

Chosen Option : 3

Q.12 Arrange the following steps which are commonly used in purchasing from first to last.

- P. Purchase Requisition (Indenting)
- Q. Inspection of Materials
- R. Follow-up of purchase orders

- Ans
- 1. QPR
 - 2. PRQ
 - 3. RQP
 - 4. PQR

Question ID : 630680440901

Option 1 ID : 6306801721260

Option 2 ID : 6306801721258

Option 3 ID : 6306801721261

Option 4 ID : 6306801721259

Status : Answered

Chosen Option : 3

Q.13 Which of the following are the features of Enterprise Resource Planning (ERP)?

- I. It is a software architecture, which integrates all the functions of the business.
- II. It has extremely powerful, user-friendly "graphic-user-interface" (GUI) technology.

- Ans
- 1. Both I and II
 - 2. Neither I nor II
 - 3. Only I
 - 4. Only II

Question ID : 630680440917

Option 1 ID : 6306801721324

Option 2 ID : 6306801721325

Option 3 ID : 6306801721322

Option 4 ID : 6306801721323

Status : Answered

Chosen Option : 3

Q.14 Which of the following is NOT an advantage of Online shopping?

- Ans
- 1. No need to go in crowded places
 - 2. Online payment fraud risks
 - 3. Better and affordable price range
 - 4. Privacy in terms of discreet shopping

Question ID : 630680440953
Option 1 ID : 6306801721467
Option 2 ID : 6306801721466
Option 3 ID : 6306801721468
Option 4 ID : 6306801721469
Status : Answered
Chosen Option : 3

Q.15 As per ISO 9000 documentation pyramid, arrange the following from Level I to Level 3.

- I. Policy
- II. Procedures
- III. Practice

- Ans
- 1. III, I, II
 - 2. I, II, III
 - 3. I, III, II
 - 4. II, I, III

Question ID : 630680440916
Option 1 ID : 6306801721319
Option 2 ID : 6306801721318
Option 3 ID : 6306801721320
Option 4 ID : 6306801721321
Status : Answered
Chosen Option : 3

Q.16 Which of the following can be determined by using computers in materials planning?

- I. Details of items required to manufacture the final product
- II. Requirements of raw materials, components etc.

- Ans
- 1. Neither I nor II
 - 2. Only I
 - 3. Only II
 - 4. Both I and II

Question ID : 630680440928
Option 1 ID : 6306801721369
Option 2 ID : 6306801721366
Option 3 ID : 6306801721367
Option 4 ID : 6306801721368
Status : Answered
Chosen Option : 3

Q.17 Which of the following are the advantages of correct material handling?

- I. Time management
- II. Qualitative goods
- III. Proper utilization of space to store the goods

- Ans
- 1. I, II and III
 - 2. Only I and II
 - 3. Only I and III
 - 4. Only II and III

Question ID : 630680440952
Option 1 ID : 6306801721465
Option 2 ID : 6306801721463
Option 3 ID : 6306801721464
Option 4 ID : 6306801721462
Status : Answered
Chosen Option : 3

Q.18 Sometimes inspection of items is carried out at supplier's place and it is known as

- Ans
- 1. Pre-delivery inspection
 - 2. Obsolete inspection
 - 3. Premium inspection
 - 4. Post-delivery inspection

Question ID : 630680440940
Option 1 ID : 6306801721415
Option 2 ID : 6306801721417
Option 3 ID : 6306801721416
Option 4 ID : 6306801721414
Status : Answered
Chosen Option : 3

Q.19 In the context of inviting quotations, which of the following is a closing sentence in the letter of enquiry?

- Ans
- 1. We should be grateful if you would kindly inform us of the terms and conditions for the supply of "XYZ" product
 - 2. Please quote your lowest rate for the following items
 - 3. May we request you to let us have your lowest rates for the following items which we require in November?
 - 4. We look forward to hearing from you soon. If your quotation is suitable, we shall be happy to buy all our requirements this season from you

Question ID : 630680440885
Option 1 ID : 6306801721195
Option 2 ID : 6306801721194
Option 3 ID : 6306801721197
Option 4 ID : 6306801721196
Status : Answered
Chosen Option : 3

Q.20 _____ are the warehouses which are licensed by the customs authorities to accept imported goods for storage before the payment of custom duties.

- Ans
- 1. Branded warehouses
 - 2. Distribution warehouses
 - 3. Small warehouses
 - 4. Bonded warehouses

Question ID : 630680440958
Option 1 ID : 6306801721487
Option 2 ID : 6306801721489
Option 3 ID : 6306801721488
Option 4 ID : 6306801721486
Status : Answered
Chosen Option : 3

Q.21 The probability of rejecting a good lot is called the _____.

- Ans
- 1. Consumer's risk
 - 2. Demand's risk
 - 3. Product's risk
 - 4. Producer's risk

Question ID : 630680440915
Option 1 ID : 6306801721314
Option 2 ID : 6306801721316
Option 3 ID : 6306801721317
Option 4 ID : 6306801721315
Status : Answered
Chosen Option : 3

Q.22 Which of the following statements is correct regarding the receipt and inspection of the material?

- I. All incoming materials on receipt are physically checked, counted and then referred to the inspection/quality control department.
- II. The rejected items are returned to supplier, while accepted items are identified and sent to storage for recording.

- Ans
- 1. Both I and II
 - 2. Neither I nor II
 - 3. Only II
 - 4. Only I

Question ID : 630680440939
Option 1 ID : 6306801721412
Option 2 ID : 6306801721413
Option 3 ID : 6306801721411
Option 4 ID : 6306801721410
Status : Answered
Chosen Option : 3

Q.23 Which of the following pair of "type of Operating characteristic (OC) curve – its explanation" is correct?
I. Type-A OC curve - Used to calculate probabilities of acceptance for an isolated lot of finite size
II. Type-B OC curve - Gives the probability of acceptance of large lots or lots drawn from a continuous process

- Ans
- 1. Only I
 - 2. Neither I nor II
 - 3. Only II
 - 4. Both I and II

Question ID : 630680440910
Option 1 ID : 6306801721294
Option 2 ID : 6306801721297
Option 3 ID : 6306801721295
Option 4 ID : 6306801721296
Status : Answered
Chosen Option : 3

Q.24 As per the latest amendment in GFR, 2017 rule 149, The GeM portal shall be utilized by the Government Buyers for direct on-line purchases up to _____ through any of the available suppliers on the GeM, meeting the requisite quality, specification and delivery period.

- Ans
- 1. Rs. 10000
 - 2. Rs. 90000
 - 3. Rs. 25000
 - 4. Rs. 150000

Question ID : 630680440904
Option 1 ID : 6306801721271
Option 2 ID : 6306801721270
Option 3 ID : 6306801721272
Option 4 ID : 6306801721273
Status : Answered
Chosen Option : 3

Q.25 _____ means any building structure or other protected enclosure which is used or may be used for the purpose of storing goods on behalf of the depositors but does not include cloak rooms attached to hotels, railway stations, the premises of other public carriers and the like.

- Ans
- 1. Shop
 - 2. Warehouse
 - 3. Restaurant
 - 4. Garage

Question ID : 630680440961
Option 1 ID : 6306801721498
Option 2 ID : 6306801721499
Option 3 ID : 6306801721500
Option 4 ID : 6306801721501
Status : Answered
Chosen Option : 3

Q.26 In which type of sampling, the lot is divided into several strata and samples are taken from the each?

- Ans
- 1. Selected sampling
 - 2. Cluster sampling
 - 3. Stratified sampling
 - 4. Two-stage sampling

Question ID : 630680440938
Option 1 ID : 6306801721409
Option 2 ID : 6306801721406
Option 3 ID : 6306801721408
Option 4 ID : 6306801721407
Status : Answered
Chosen Option : 3

Q.27 Simple average method means the average cost of material in hand on the _____ from stores.

- Ans
- 1. Date of issue
 - 2. Year end
 - 3. Day end
 - 4. Month end

Question ID : 630680440945
Option 1 ID : 6306801721437
Option 2 ID : 6306801721435
Option 3 ID : 6306801721436
Option 4 ID : 6306801721434
Status : Answered
Chosen Option : 3

Q.28 In purchase procedure, which of the following is NOT an objective of Negotiations?

- Ans
- 1. To obtain a reasonable price for specified quality
 - 2. To exert no control over the manner in which the contract is performed
 - 3. To obtain the quality specified
 - 4. To persuade the supplier to give maximum cooperation

Question ID : 630680440918
Option 1 ID : 6306801721327
Option 2 ID : 6306801721328
Option 3 ID : 6306801721326
Option 4 ID : 6306801721329
Status : Answered
Chosen Option : 3

Q.29 In the context of purchasing procedure, which of the following are the types of tenders?

- I. Single tender
- II. Limited tender
- III. Open tender

- Ans
- 1. Only I and II
 - 2. Only I
 - 3. Only II and III
 - 4. I, II and III

Question ID : 630680440903
 Option 1 ID : 6306801721269
 Option 2 ID : 6306801721268
 Option 3 ID : 6306801721267
 Option 4 ID : 6306801721266
 Status : Answered
 Chosen Option : 3

Q.30 Which of the following is NOT a characteristic of Good Management Information System?

- Ans
- 1. Completeness
 - 2. Accuracy and Reliability
 - 3. Clarity and Conciseness
 - 4. Irrelevancy

Question ID : 630680440931
 Option 1 ID : 6306801721378
 Option 2 ID : 6306801721380
 Option 3 ID : 6306801721379
 Option 4 ID : 6306801721381
 Status : Answered
 Chosen Option : 3

Q.31 Match the following in the context of types of containers used for storage in storekeeping.

	Container		Items to be stored
I	Cylinder	1	Small metal parts
II	Bins	2	Gases
III	Barrels	3	Oils

- Ans
- 1. I-3, II-2, III-1
 - 2. I-2, II-1, III-3
 - 3. I-1, II-2, III-3
 - 4. I-3, II-1, III-2

Question ID : 630680440898
 Option 1 ID : 6306801721248
 Option 2 ID : 6306801721246
 Option 3 ID : 6306801721247
 Option 4 ID : 6306801721249
 Status : Answered
 Chosen Option : 2

Q.32 The attributes of logistics management can create customer value in which of the following ways?

- I. Effectiveness
- II. Efficiency
- III. Differentiation

Ans 1. I, II and III

2. Only II and III

3. Only I and II

4. Only I

Question ID : 630680440894

Option 1 ID : 6306801721231

Option 2 ID : 6306801721232

Option 3 ID : 6306801721230

Option 4 ID : 6306801721233

Status : Answered

Chosen Option : 3

Q.33 Which of the following statement is correct regarding the manual material handling?

- I. Manual material handling activities are defined as unaided human acts of pulling, pushing, lowering, lifting, carrying, holding or releasing an object
- II. Manual material handling is defined as unaided motions of objects combined with twisting and awkward postures

Ans 1. Both I and II

2. Only II

3. Only I

4. Neither I nor II

Question ID : 630680440950

Option 1 ID : 6306801721456

Option 2 ID : 6306801721455

Option 3 ID : 6306801721454

Option 4 ID : 6306801721457

Status : Answered

Chosen Option : 2

Q.34 Which of the following are the main elements of warehousing?

- I. Space
- II. Equipment
- III. People

Ans 1. Only I and III

2. I, II and III

3. Only I and II

4. Only II and III

Question ID : 630680440959

Option 1 ID : 6306801721492

Option 2 ID : 6306801721493

Option 3 ID : 6306801721491

Option 4 ID : 6306801721490

Status : Answered

Chosen Option : 3

Q.35 Plant and equipment in poor condition is a major cause of scraps due to _____.

- Ans
- 1. Methods
 - 2. Materials
 - 3. Men
 - 4. Machines

Question ID : 630680440948
 Option 1 ID : 6306801721446
 Option 2 ID : 6306801721447
 Option 3 ID : 6306801721449
 Option 4 ID : 6306801721448
 Status : Answered
 Chosen Option : 2

Q.36 Which of the following statement is NOT correct regarding the different modes of transportation of materials?

- Ans
- 1. Capital costs for ways and pipelines are low
 - 2. Railways provide their own ways, terminals, and vehicles
 - 3. Trucks do not provide their own ways (roads and highways) but pay a fee to the government as license, gasoline, and other taxes and tolls for the use of roads.
 - 4. The main advantage of air transport is the speed of service, especially over long distances.

Question ID : 630680440920
 Option 1 ID : 6306801721337
 Option 2 ID : 6306801721334
 Option 3 ID : 6306801721335
 Option 4 ID : 6306801721336
 Status : Answered
 Chosen Option : 3

Q.37 Match the following in the context of Materials Information System.

	Level of information		Explanation
I	Operational	1	Used for short term decision making
II	Managerial	2	Used for medium term decision making
III	Strategic	3	Used for long term decision making

- Ans
- 1. I-2, II-1, III-3
 - 2. I-1, II-2, III-3
 - 3. I-3, II-2, III-1
 - 4. I-3, II-1, III-2

Question ID : 630680440932
 Option 1 ID : 6306801721382
 Option 2 ID : 6306801721383
 Option 3 ID : 6306801721384
 Option 4 ID : 6306801721385
 Status : Answered
 Chosen Option : 3

Q.38 "First in first out" method is also known as the _____.

- Ans 1. Original cost method
 2. Fair cost method
 3. Demand cost method
 4. Market cost method

Question ID : 630680440944
Option 1 ID : 6306801721430
Option 2 ID : 6306801721431
Option 3 ID : 6306801721433
Option 4 ID : 6306801721432
Status : Answered
Chosen Option : 3

Q.39 Which of the following statements is correct regarding the application of computers in Materials Management?

- I. A computer offers a materials manager the immediate availability of more complete data for use in making cost-affective materials related decisions
II. Many reports; daily, weekly, monthly, quarterly or yearly are generated by the computers regarding the purchasing and inventories

- Ans 1. Both I and II
 2. Only II
 3. Neither I nor II
 4. Only I

Question ID : 630680440936
Option 1 ID : 6306801721400
Option 2 ID : 6306801721399
Option 3 ID : 6306801721401
Option 4 ID : 6306801721398
Status : Answered
Chosen Option : 3

Q.40 Warehousing constitutes a significant portion of logistics cost whose aggregate involves _____.

- I. Handling costs
II. Operating costs

- Ans 1. Neither I nor II
 2. Only I
 3. Both I and II
 4. Only II

Question ID : 630680440962
Option 1 ID : 6306801721505
Option 2 ID : 6306801721502
Option 3 ID : 6306801721504
Option 4 ID : 6306801721503
Status : Answered
Chosen Option : 3

Q.41 The formulation of lots can influence the effectiveness of the acceptance sampling plan. There are several important considerations in forming lots for inspection. Which of the following is one of those considerations?
I. Larger lots are preferred over smaller ones
II. Lots should not be homogeneous

- Ans
- 1. Neither I nor II
 - 2. Only II
 - 3. Only I
 - 4. Both I and II

Question ID : 630680440912
Option 1 ID : 6306801721305
Option 2 ID : 6306801721303
Option 3 ID : 6306801721302
Option 4 ID : 6306801721304
Status : Answered
Chosen Option : 3

Q.42 A supply chain benefits the firm by enhancing _____.
I. Learning
II. Communication

- Ans
- 1. Only I
 - 2. Neither I nor II
 - 3. Both I and II
 - 4. Only II

Question ID : 630680440893
Option 1 ID : 6306801721226
Option 2 ID : 6306801721229
Option 3 ID : 6306801721228
Option 4 ID : 6306801721227
Status : Answered
Chosen Option : 3

Q.43 Which of the following are the objectives of X-bar and R charts?
I. To show when the process is likely to be out of control
II. To determine whether the process capability is compatible with the specifications

- Ans
- 1. Only II
 - 2. Only I
 - 3. Both I and II
 - 4. Neither I nor II

Question ID : 630680440908
Option 1 ID : 6306801721287
Option 2 ID : 6306801721286
Option 3 ID : 6306801721288
Option 4 ID : 6306801721289
Status : Answered
Chosen Option : 3

Q.44 Which of the following is NOT a reason for using Sampling inspection?
I. Human error is estimated to be as high as 20% when performing long-term repetitive testing
II. It is too cheap to test all the batch

- Ans
- 1. Both I and II
 - 2. Only I
 - 3. Neither I nor II
 - 4. Only II

Question ID : 630680440911
Option 1 ID : 6306801721300
Option 2 ID : 6306801721298
Option 3 ID : 6306801721301
Option 4 ID : 6306801721299
Status : Answered
Chosen Option : 1

Q.45 Which of the following management activities are part of the Supply chain management concept?
I. Warehousing
II. Quality control
III. Inventory control

- Ans
- 1. Only II and III
 - 2. I, II and III
 - 3. Only I
 - 4. Only I and II

Question ID : 630680440891
Option 1 ID : 6306801721219
Option 2 ID : 6306801721218
Option 3 ID : 6306801721220
Option 4 ID : 6306801721221
Status : Answered
Chosen Option : 3

Q.46 A shaft having a diameter of 1 inch \pm .005 inch is specified. What will be the lower specification limit (LSL) for this data?

- Ans
- 1. 1.235
 - 2. 1.565
 - 3. 0.365
 - 4. 0.995

Question ID : 630680440913
Option 1 ID : 6306801721306
Option 2 ID : 6306801721309
Option 3 ID : 6306801721307
Option 4 ID : 6306801721308
Status : Answered
Chosen Option : 3

Q.47 The image given below represents which of the following mechanical material handling equipment?



- Ans
- 1. Conveyor
 - 2. Cranes
 - 3. Industrial trucks
 - 4. Containers

Question ID : 630680440949
Option 1 ID : 6306801721451
Option 2 ID : 6306801721450
Option 3 ID : 6306801721452
Option 4 ID : 6306801721453
Status : Answered
Chosen Option : 3

Q.48 Which of the following are the functions of Store keeping?

- I. Classification of materials
- II. Storage of materials
- III. Preservation of materials

- Ans
- 1. Only II and III
 - 2. I, II and III
 - 3. Only I and II
 - 4. Only I

Question ID : 630680440899
Option 1 ID : 6306801721251
Option 2 ID : 6306801721250
Option 3 ID : 6306801721253
Option 4 ID : 6306801721252
Status : Answered
Chosen Option : 3

Q.49 Which of the following statement is correct regarding the Obsolete materials?

- I. Obsolete items include items like spare parts of machines which have been phased out
- II. Obsolete items can also be defined as, partially used or unused items/equipment which are no longer relevant

- Ans
- 1. Only II
 - 2. Both I and II
 - 3. Only I
 - 4. Neither I nor II

Question ID : 630680440947
Option 1 ID : 6306801721443
Option 2 ID : 6306801721444
Option 3 ID : 6306801721442
Option 4 ID : 6306801721445
Status : Answered
Chosen Option : 3

Q.50 Conveyors move materials (or people) in which of the following ways between two fixed points?

- I. Vertically
- II. Horizontally

- Ans
- 1. Neither I nor II
 - 2. Only II
 - 3. Both I and II
 - 4. Only I

Question ID : 630680440951
Option 1 ID : 6306801721461
Option 2 ID : 6306801721459
Option 3 ID : 6306801721460
Option 4 ID : 6306801721458
Status : Answered
Chosen Option : 3

Q.51 The _____ in a business letter is like greeting a person when you meet him.

- Ans
- 1. Subject
 - 2. Body
 - 3. Salutation
 - 4. Identification marks

Question ID : 630680440886
Option 1 ID : 6306801721200
Option 2 ID : 6306801721199
Option 3 ID : 6306801721198
Option 4 ID : 6306801721201
Status : Answered
Chosen Option : 3

Q.52 Which of the following is the function of Inventory Control?

- I. To run the stores effectively
- II. Technical responsibility for the state of materials

- Ans
- 1. Neither I nor II
 - 2. Only II
 - 3. Both I and II
 - 4. Only I

Question ID : 630680440934
Option 1 ID : 6306801721393
Option 2 ID : 6306801721391
Option 3 ID : 6306801721392
Option 4 ID : 6306801721390
Status : Answered
Chosen Option : 3

Q.53 CIM convention is a set of rules applicable to carriage of goods across the countries by the _____.

- Ans
- 1. Pipeline
 - 2. Air
 - 3. Road
 - 4. Rail

Question ID : 630680440923
Option 1 ID : 6306801721349
Option 2 ID : 6306801721348
Option 3 ID : 6306801721347
Option 4 ID : 6306801721346
Status : Answered
Chosen Option : 3

Q.54 In the context of purchasing, computers are used for handling which of the following?

- I. Price
- II. Lead time
- III. Ordering costs
- IV. Safety stock level

- Ans
- 1. Only I
 - 2. I, II, III and IV
 - 3. Only II and III
 - 4. Only I, II and III

Question ID : 630680440935
Option 1 ID : 6306801721396
Option 2 ID : 6306801721397
Option 3 ID : 6306801721395
Option 4 ID : 6306801721394
Status : Answered
Chosen Option : 3

Q.55 Which of the following is NOT a function of storekeeper?

- Ans
- 1. Store the stock in maximum possible space
 - 2. To keep the stores/stock in proper order and prescribed manner
 - 3. To receive the materials and to ensure about their quality and quantity
 - 4. To issue the materials on proper authorization to proper person

Question ID : 630680440896
Option 1 ID : 6306801721240
Option 2 ID : 6306801721239
Option 3 ID : 6306801721238
Option 4 ID : 6306801721241
Status : Answered
Chosen Option : 3

Q.56 "While inviting the tenders or placing the enquiries, quality specifications mentioning tolerances etc. should be clearly spelled out." The statement given above represents which of the following purchasing parameters?

- Ans
- 1. Right price
 - 2. Right quality
 - 3. Right quantity
 - 4. Right time

Question ID : 630680440902
Option 1 ID : 6306801721262
Option 2 ID : 6306801721263
Option 3 ID : 6306801721265
Option 4 ID : 6306801721264
Status : Answered
Chosen Option : 3

Q.57 Which of the following statements is NOT correct regarding the Forward buying?

- I. It simply means buying in very less quantity as comparison to the normal requirements
- II. It results in increased storage cost

- Ans
- 1. Both I and II
 - 2. Only II
 - 3. Neither I nor II
 - 4. Only I

Question ID : 630680440905
Option 1 ID : 6306801721276
Option 2 ID : 6306801721275
Option 3 ID : 6306801721277
Option 4 ID : 6306801721274
Status : Answered
Chosen Option : 1

Q.58 The specific way in which materials move depends upon many factors. Which of the following are those factors?

- I. Channels of distribution that a firm is using
- II. Types of markets served

- Ans
- 1. Only II
 - 2. Neither I nor II
 - 3. Only I
 - 4. Both I and II

Question ID : 630680440926
Option 1 ID : 6306801721359
Option 2 ID : 6306801721361
Option 3 ID : 6306801721358
Option 4 ID : 6306801721360
Status : Answered
Chosen Option : 3

Q.59 _____ application bundles services that allow for transactions involving purchase of goods using mobile devices.

- Ans
- 1. Mobile entertainment
 - 2. Mobile marketing
 - 3. Mobile shopping
 - 4. Mobile ticketing

Question ID : 630680440955
Option 1 ID : 6306801721475
Option 2 ID : 6306801721474
Option 3 ID : 6306801721477
Option 4 ID : 6306801721476
Status : Answered
Chosen Option : 3

Q.60 Which of the following statements is correct regarding the different types of purchase systems?

- I. Under stockless purchasing, a hospital has full financial responsibility for inventory of the goods being purchased
- II. The blanket order is the most popular alternative to a single item, fixed price order

- Ans
- 1. Neither I nor II
 - 2. Both I and II
 - 3. Only II
 - 4. Only I

Question ID : 630680440906
Option 1 ID : 6306801721281
Option 2 ID : 6306801721280
Option 3 ID : 6306801721279
Option 4 ID : 6306801721278
Status : Answered
Chosen Option : 3

Q.61 _____ are the medium-sized computers.

- Ans
- 1. Mainframe computers
 - 2. Minicomputers
 - 3. Super computers
 - 4. Micro computers

Question ID : 630680440937
Option 1 ID : 6306801721405
Option 2 ID : 6306801721404
Option 3 ID : 6306801721403
Option 4 ID : 6306801721402
Status : Answered
Chosen Option : 2

Q.62 Which of the following activity is NOT carried out in the Physical supply/Distribution system?

- Ans
- 1. Materials handling
 - 2. Packaging
 - 3. Production planning
 - 4. Transportation

Question ID : 630680440892
Option 1 ID : 6306801721224
Option 2 ID : 6306801721223
Option 3 ID : 6306801721225
Option 4 ID : 6306801721222
Status : Answered
Chosen Option : 3

Q.63 In the context of P charts, _____ may be defined as the ratio between the total number of defective products observed in all the samples combined and the total number of products inspected.

- Ans
- 1. Major line value
 - 2. Fraction line value
 - 3. Central line value
 - 4. Standard line value

Question ID : 630680440909
Option 1 ID : 6306801721292
Option 2 ID : 6306801721291
Option 3 ID : 6306801721290
Option 4 ID : 6306801721293
Status : Answered
Chosen Option : 3

Q.64 What should be seen before a railway material consignment note is accepted as an authority for booking railway materials and stores?

- I. All the foils are written by carbon process, in one operation
- II. It bears the stamp of the office of issue

- Ans
- 1. Only II
 - 2. Neither I nor II
 - 3. Only I
 - 4. Both I and II

Question ID : 630680440925
Option 1 ID : 6306801721355
Option 2 ID : 6306801721357
Option 3 ID : 6306801721354
Option 4 ID : 6306801721356
Status : Answered
Chosen Option : 3

Q.65 Which of the following are the objectives of Materials Management?

- I. Maximize the use of firm's resources
- II. Provide the required level of customer service

- Ans
- 1. Only I
 - 2. Neither I nor II
 - 3. Both I and II
 - 4. Only II

Question ID : 630680440890
Option 1 ID : 6306801721214
Option 2 ID : 6306801721217
Option 3 ID : 6306801721216
Option 4 ID : 6306801721215
Status : Answered
Chosen Option : 3

Q.66 In the context of issue of materials, what is the full form of SIV?

- Ans
- 1. Store Irregular Vendor
 - 2. Store Issue Vendor
 - 3. Store Irregular Voucher
 - 4. Store Issue Voucher

Question ID : 630680440941
Option 1 ID : 6306801721421
Option 2 ID : 6306801721420
Option 3 ID : 6306801721419
Option 4 ID : 6306801721418
Status : Answered
Chosen Option : 3

Q.67 A document which acts as a receipt of goods and as evidence of carriage of goods by road or rail is called _____.

- Ans
- 1. Air waybill
 - 2. Bill of lading
 - 3. Bottomry bond
 - 4. Consignment Note

Question ID : 630680440924
Option 1 ID : 6306801721353
Option 2 ID : 6306801721351
Option 3 ID : 6306801721352
Option 4 ID : 6306801721350
Status : Answered
Chosen Option : 3

Q.68 Which of the following are the functions in warehousing?

- I. Order picking
- II. Order accumulation

Ans 1. Both I and II

- 2. Only I
- 3. Only II
- 4. Neither I nor II

Question ID : 630680440957

Option 1 ID : 6306801721484

Option 2 ID : 6306801721482

Option 3 ID : 6306801721483

Option 4 ID : 6306801721485

Status : Answered

Chosen Option : 3

Q.69 A document which acts as a receipt of goods and as evidence of the carriage of goods by air is called _____.

Ans 1. Air waybill

- 2. Consignment Note
- 3. Contract of affreightment
- 4. Clean bill of lading

Question ID : 630680440922

Option 1 ID : 6306801721344

Option 2 ID : 6306801721345

Option 3 ID : 6306801721343

Option 4 ID : 6306801721342

Status : Answered

Chosen Option : 3

Q.70 In the context of types of control charts in Statistical Quality Control, which of the following chart is used for attributes for analysis of fraction defectives?

- Ans 1. C chart
 2. X-bar chart
 3. P chart
 4. R chart

Question ID : 630680440907

Option 1 ID : 6306801721283

Option 2 ID : 6306801721285

Option 3 ID : 6306801721282

Option 4 ID : 6306801721284

Status : Answered

Chosen Option : 3

Q.71 In a warehouse, the average inventory carried depends on the _____.

- I. Safety stock
- II. Order quantity

Ans 1. Both I and II
 2. Only II
 3. Neither I nor II
 4. Only I

Question ID : 630680440963
Option 1 ID : 6306801721508
Option 2 ID : 6306801721507
Option 3 ID : 6306801721509
Option 4 ID : 6306801721506
Status : Answered
Chosen Option : 4

Q.72 _____ is where business transactions take place via telecommunications networks, especially the Internet.

Ans 1. Educational research network
 2. Gateway internet access service
 3. E-tailing
 4. E-commerce

Question ID : 630680440954
Option 1 ID : 6306801721473
Option 2 ID : 6306801721472
Option 3 ID : 6306801721471
Option 4 ID : 6306801721470
Status : Answered
Chosen Option : 3

Q.73 _____ is a contract of carriage of goods by sea.

Ans 1. Absolute liability
 2. Contract of affreightment
 3. Consignment Note
 4. Bottomry Bond

Question ID : 630680440921
Option 1 ID : 6306801721340
Option 2 ID : 6306801721338
Option 3 ID : 6306801721341
Option 4 ID : 6306801721339
Status : Answered
Chosen Option : 3

Q.74 Match the following in the context of transportation of materials.

	Terms		Explanation
I	Ways	1	These are of various types and used in all modes of transportation except pipelines
II	Terminals	2	Places where carriers loads and unloads goods
III	Vehicles	3	Paths over which the carrier operates

- Ans
- 1. I-3, II-1, III-2
 - 2. I-1, II-2, III-3
 - 3. I-2, II-1, III-3
 - 4. I-3, II-2, III-1

Question ID : 630680440919
 Option 1 ID : 6306801721333
 Option 2 ID : 6306801721331
 Option 3 ID : 6306801721330
 Option 4 ID : 6306801721332
 Status : Answered
 Chosen Option : 3

Q.75 Which of the following statements is correct regarding the Bin cards used in stores?

- I. It is attached to each bin, rack, shelf or other container for stores.
 II. A record of all materials entering or leaving the bin and balance materials in hand are recorded in this card.

- Ans
- 1. Neither I nor II
 - 2. Both I and II
 - 3. Only II
 - 4. Only I

Question ID : 630680440942
 Option 1 ID : 6306801721425
 Option 2 ID : 6306801721424
 Option 3 ID : 6306801721423
 Option 4 ID : 6306801721422
 Status : Answered
 Chosen Option : 3

Q.76 The functional areas of logistics, termed "Logistics Mix" by Martin Christopher, consist of which of the following functions?

- I. Inventory control
 II. Warehousing

- Ans
- 1. Only II
 - 2. Only I
 - 3. Both I and II
 - 4. Neither I nor II

Question ID : 630680440927
 Option 1 ID : 6306801721363
 Option 2 ID : 6306801721362
 Option 3 ID : 6306801721364
 Option 4 ID : 6306801721365
 Status : Answered
 Chosen Option : 3

Q.77 In the context of ways of starting a sales letter, which of the following pair of "way-its example" is correct?

- I. Making a striking statement - For the last five years we have been working to produce the model you want
II. Making special offers - We offer absolutely a calendar free with every copy of our new dictionary

- Ans 1. Only I
 2. Both I and II
 3. Neither I nor II
 4. Only II

Question ID : 630680440887
Option 1 ID : 6306801721202
Option 2 ID : 6306801721204
Option 3 ID : 6306801721205
Option 4 ID : 6306801721203
Status : Answered
Chosen Option : 1

Q.78 The official records of discussions held, and decisions taken at a meeting are called

- Ans 1. Minutes
 2. Agenda
 3. Memorandum
 4. Notice

Question ID : 630680440888
Option 1 ID : 6306801721206
Option 2 ID : 6306801721207
Option 3 ID : 6306801721209
Option 4 ID : 6306801721208
Status : Answered
Chosen Option : 3

Q.79 A standard procedure of material issue from stores should be developed keeping in view which of the following points?

- I. Materials should be kept in an accessible and definite place to enable quick issue
II. Materials should be issued only against proper authorization (e.g., Materials Requisition)

- Ans 1. Only I
 2. Only II
 3. Both I and II
 4. Neither I nor II

Question ID : 630680440943
Option 1 ID : 6306801721426
Option 2 ID : 6306801721427
Option 3 ID : 6306801721428
Option 4 ID : 6306801721429
Status : Answered
Chosen Option : 3

Test

Prime

By Adda247

Previous Year Papers PDF

PRACTICE MORE, SCORE HIGHER!



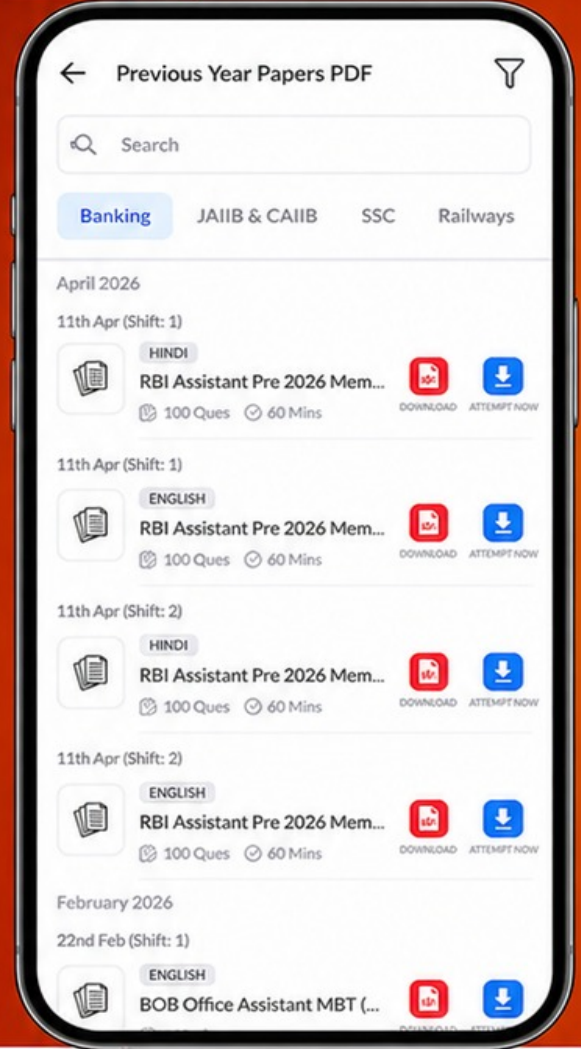
Free
25,000+
PDF's

High-Quality | Exam-Wise | Updated Regularly

ATTEMPT AS
MOCK



Turn PDFs into real exam experience.
Analyze. Improve. Succeed.



Topic-wise & Exam-wise PDFs



Download & Study Offline



Attempt as Mock & Track Score



Smart Analysis & Performance

AVAILABLE IN



Banking



SSC



Railway



Teaching



UGC



Agriculture



Nursing



Bihar



UP



Punjab



WB



Odisha



TN



AP & Telangana



Haryana



DOWNLOAD THE APP



Q.80 Which of the following statements is correct regarding the Current value method for valuation of materials issued from stores?

I. This method charges the current market price for the materials irrespective of the purchase price

II. This method involves a great difficulty in finding out actual market price at every issue from the stores

- Ans
- 1. Only II
 - 2. Both I and II
 - 3. Only I
 - 4. Neither I nor II

Question ID : 630680440946

Option 1 ID : 6306801721439

Option 2 ID : 6306801721440

Option 3 ID : 6306801721438

Option 4 ID : 6306801721441

Status : Answered

Chosen Option : 3

