

# **UP Police Constable**

**Previous Year Paper  
28 Jan, 2019 Shift 2**



**Test  
Prime**

By Adda247

# ALL EXAMS, ONE SUBSCRIPTION



Test. Analyze. Improve. Repeat.



**Don't just *prepare*. *Perform*.**

Test Prime — built only for mock tests.



**1,50,000+**  
Mock Tests



**25,000+**  
Previous Year Papers



**800+**  
Exam Covered



**500% Refund**  
on Selection



**5 lakh+**  
Free Quizzes



**Daily**  
Free PDFs



**Job Alerts**  
Stay Updated

- Multilingual
- Detailed Solution
- Strong and Weak Areas



**All India  
Rankings**

Compete with lakhs.  
Rank. Improve. Repeat.



← Adda247 test prime

Rating ▾

Editors' choice

New



Adda247 Test Prime  
Adda Education • Education  
Installed



**DOWNLOAD THE APP**



## 150 Questions

**Que. 1** The wavelength of violet colour light is about \_\_\_\_\_.

1. 10 - 11pm
2. 1 - 10mm
3. 455 - 390 nm
4. 230 - 310 pm

Correct Option - 3

**Que. 2** Butter is an example of a \_\_\_\_\_.

1. suspension
2. colloidal solution
3. emulsion
4. amalgam

Correct Option - 3

**Que. 3** Which of the following salts will NOT have 10 molecules of water of crystallisation?

1. Glauber's salt
2. Washing soda
3. Borax
4. Epsom salt

Correct Option - 4

**Que. 4** Who founded the Allahabad University in 1887?

1. Dr. Sarvepalli Radhakrishnan
2. Jonathan Duncan
3. Sir William Muir
4. Madan Mohan Malaviya

Correct Option - 3

**Que. 5** The first woman Chief Minister was appointed in 1963. Which Indian state government did she lead?

1. Uttar Pradesh
2. Tamil Nadu
3. West Bengal
4. Assam

Correct Option - 1

---

**Que. 6** Who was elected as the Chief Minister of Uttar Pradesh in 2017?

1. Govind Ballabh Pant
2. Yogi Adityanath
3. Akhilesh Yadav
4. Mayawati

Correct Option - 2

---

**Que. 7** Which of the following is the state bird of Uttar Pradesh?

1. Parrot
2. Eagle
3. Kingfisher
4. Crane

Correct Option - 4

---

**Que. 8** What was Uttar Pradesh known as from the year 1937-1950?

1. Utara
2. United Provinces
3. Uttar Province
4. Ram Krishna Pradesh

Correct Option - 2

---

**Que. 9** The Kailash Fair is celebrated in honour of Lord Shiva in which city of Uttar Pradesh?

1. Agra
2. Varanasi
3. Kanpur
4. Lucknow

Correct Option - 1

---

**Que. 10** Which of the following is the longest canal of Uttar Pradesh?

1. Agra Canal
2. Sharda Canal
3. Upper Ganga Canal
4. Lower Ganga Canal

Correct Option - 2

---

**Que. 11** In which year did Uttarakhand come into existence?

1. 2000
2. 1991
3. 2016
4. 2011

Correct Option - 1

**Que. 12** In 1930, CV-Raman won the Nobel prize for \_\_\_\_\_.

1. Literature
2. Peace
3. Physics
4. Economics

Correct Option - 3

**Que. 13** Which book by Vikram Seth is a collection of ten fables as poems?

1. An Equal Music
2. Beastly Tales
3. The Rivered Earth
4. Summer Requiem

Correct Option - 2

**Que. 14** Name the last poem written by Harivanshrai Bachchan.

1. Ek November 1984
2. Chal Mardane
3. Do Chattane
4. Agneepath

Correct Option - 1

**Que. 15** The blood group system was discovered by \_\_\_\_\_.

1. Friedrich Stromeyer
2. Karl Wilhelm Scheele
3. William Murdock
4. Karl Landsteiner

Correct Option - 4

**Que. 16** \_\_\_\_\_ is a computer worm that targets industrial control systems. It attacked Iran's nuclear program in 2007.

1. Conficker
2. Stuxnet
3. Zeus
4. Sasser

Correct Option - 2

---

**Que. 17** The strait between Tamil Nadu and the Mannar district of Sri Lanka is called \_\_\_\_\_.

1. Strait of Malacca
2. Palk Strait
3. Sunda Strait
4. Maliku Kandu

Correct Option - 2

---

**Que. 18** Which of the following states of the United States of America does NOT share a boundary with any other US state?

1. Florida
2. Alaska
3. Rhode Island
4. Maryland

Correct Option - 2

---

**Que. 19** Which is the third most populated country in the world?

1. Indonesia
2. Brazil
3. United States of America
4. United Kingdom

Correct Option - 3

---

**Que. 20** Which of the following is NOT one of the emirates of the United Arab Emirates?

1. Muscat
2. Dubai
3. Abu Dhabi
4. Sharjah

Correct Option - 1

---

**Que. 21** Which one of the following is the capital of Bahrain?

1. Ankara
2. Doha
3. Manama
4. Beirut

Correct Option - 3

**Que. 22** \_\_\_\_\_ was the first woman speaker of the Lok Sabha.

1. Sushma Swaraj
2. Meira Kumar
3. Pratibha Patil
4. Sumitra Mahajan

Correct Option - 2

**Que. 23** In which of the following city the Sepoy Mutiny of 1857 War of Independence started?

1. Jhansi
2. Hyderabad
3. Delhi
4. Meerut

Correct Option - 4

**Que. 24** The traditional snack 'Khandvi' is associated with which Indian state?

1. Gujarat
2. Karnataka
3. West Bengal
4. Bihar

Correct Option - 1

**Que. 25** Name the first Hindi-language newspaper of India, first published on 30 May 1826.

1. Dainik Bhaskar
2. Udant Martand
3. Patrika
4. Deshbandhu

Correct Option - 2

**Que. 26** Which of the following is a high-yielding seed variety of wheat that contributed to India's Green Revolution?

1. Indira Sona

2. Lerma Rojo
3. Arize Tej
4. Ankur

Correct Option - 2

---

**Que. 27** \_\_\_\_\_ prepared the initial draft of the Indian Constitution in February 1948?

1. Beohar Rammanohar Sinha
2. Nandalal Bose
3. Shyama Prasad Mukherjee
4. Benegal Narsing Rau

Correct Option - 4

---

**Que. 28** Umaid Bhawan Palace is in which city?

1. Udaipur
2. Jodhpur
3. Musuru
4. Jaipur

Correct Option - 2

---

**Que. 29** Lavani is a famous folk-dance form of which Indian state?

1. Uttar Pradesh
2. Maharashtra
3. Sikkim
4. Tamil Nadu

Correct Option - 2

---

**Que. 30** Which was the last year when the Rail Budget and the Union Budget were presented separately in India.

1. 2016
2. 2012
3. 2008
4. 2004

Correct Option - 1

---

**Que. 31** Who was the first de facto Governor- General of India from 1773 to 1785?

1. Warren Hastings
2. Lord Minto

3. George Watson
4. William George Wallker

Correct Option - 1

**Que. 32** The Investment Information and Credit Rating Agency (ICRA) has its headquarters in \_\_\_\_\_.

1. Mumbai
2. Bengaluru
3. Gurugram
4. Chennai

Correct Option - 3

**Que. 33** The Indian Government has made tourism illegal in which of these islands?

1. Praslin Island
2. Pemba Island
3. Tromelin Island
4. Sentinel Island

Correct Option - 4

**Que. 34** The first civil airport of which Indian state was inaugurated on September 2018?

1. Sikkim
2. Mizoram
3. Nagaland
4. Manipur

Correct Option - 1

**Que. 35** The first Defence Minister of independent India was \_\_\_\_\_.

1. Kailash Nath Katju
2. VK Krishna Menon
3. Baldev Singh
4. Yashwantrao Chavan

Correct Option - 3

**Que. 36** The island which has Sardar Vallabhbhai Patel's 'Statue of Unity' is located in which river?

1. Narmada
2. Sabarmati
3. Tapi
4. Mahil

Correct Option - 1

**Que. 37** Pollen is produced in which part of the flower?

1. Ovary
2. Ovule
3. Anthers
4. Pistil

Correct Option - 3

**Que. 38** Which bacteria are oval-shaped or spherical?

1. Escherichia coli
2. Coccus
3. Bacillus
4. Vibrio

Correct Option - 2

**Que. 39** Retailer bought 7 articles for Rs. 10 each, 9 articles for Rs. 11, 14 articles for Rs. 15 each. Find the selling price per article if the profit is supposed to be 20% of the average cost price.

1. Rs. 15.16
2. Rs. 15.20
3. Rs. 15.24
4. Rs. 15.28

Correct Option - 1

**Que. 40** A and B can complete a task in 12 days, B and C can complete the task in 16 days, A and C can complete the task in 24 days. In how many days will they together complete the task?

1. 9.33
2. 9.67
3. 10.33
4. 10.67

Correct Option - 4

**Que. 41** A man completes a journey in 5 hrs. He travels first half of the journey at the rate of 21 km/h and the second half at 24 km/h. Find the total distance travelled.

1. 112 km
2. 116 km
3. 120 km

4. 124km

Correct Option - 1

---

**Que. 42** The ratio of speeds of two trains is 5 : 6. The second train covers 450 km in 5 hrs. What is the speed of the first train?

1. 60km/h
2. 65 km/h
3. 70km/h
4. 75 km/h

Correct Option - 4

---

**Que. 43** The length of a rectangular plot is thrice its breadth. The area of the plot  $768 \text{ m}^2$ . Find the perimeter of the plot.

1. 120m
2. 124m
3. 128m
4. 132 m

Correct Option - 3

---

**Que. 44** A 3-digit number ABC, where A is at the hundredth place, B is at the tenth place and C is at the unit's place, is re-written as ABCABC and is divided by the LCM of 7, 11 and 13. What will be the result?

1. ABC
2. CBA
3. BCA
4. AAB

Correct Option - 1

---

**Que. 45** A 5-digit number 247X8 is divisible by 44. Which digit can replace X?

1. 1
2. 2
3. 3
4. 4

Correct Option - 2

---

**Que. 46** Find the product of the square root of 256 and square root of 16 and then find the result's square root.

1. 4
2. 6

3. 8
4. 10

Correct Option - 3

---

**Que. 47** Two chairs and a table can be bought for Rs. 170. Five chairs and four tables can be bought for Rs. 530. Find the cost of a chair.

1. Rs. 40
2. Rs. 50
3. Rs. 60
4. Rs. 70

Correct Option - 2

---

**Que. 48** X has a balance of Rs. 90.53 in the bank account. What will be the balance left after a deposit of Rs. 67.14 and a withdrawal of Rs. 70.16?

1. Rs. 86.51
2. Rs. 87.51
3. Rs. 78.51
4. Rs. 79.51

Correct Option - 2

---

**Que. 49** The HCF and LCM of two numbers is 2 and 72 respectively. The bigger number is 2 more than twice the smaller number. Find the smaller number.

1. 4
2. 6
3. 8
4. 10

Correct Option - 3

---

**Que. 50** If  $\frac{4}{5} : \frac{12}{10} :: \frac{x}{6} : \frac{9}{2}$ , find the value of x.

1. 12
2. 15
3. 16.5
4. 18

Correct Option - 4

---

**Que. 51** Find 40% of 120% of 80% of 750.

1. 288

2. 320
3. 360
4. 400

Correct Option - 1

---

**Que. 52** If an article was bought for Rs. 300 and a repairing charges of Rs. 50 was paid for it and it is supposed to be sold at a profit of 20% on the marked price which is 110% of the cost price. Find the required selling price (in Rs.).

1. 440
2. 452
3. 462
4. 478

Correct Option - 3

---

**Que. 53** What is the total percentage discount applied when 2 successive discounts of 20% and 10% are applicable.

1. 25%
2. 28%
3. 32%
4. 36%

Correct Option - 2

---

**Que. 54** Find the rate of interest if the simple interest on a principal of Rs. 1,000 gave an interest of Rs. 440 in a span of 5 years.

1. 8.4%
2. 8.55%
3. 8.8%
4. 8.9%

Correct Option - 3

---

**Que. 55** Find the time for which compound interest of Rs. 331 was generated on principal of Rs. 1,000 at an annual interest rate of 10%.

1. 1 year
2. 2 years
3. 2.5 years
4. 3 years

Correct Option - 4

---

**Que. 56** Three partners, A, B and C shared profits in the ratio 4:5:6. If C's share of the profit was Rs. 200 more than that A, find the total profit generated by them.

1. Rs. 1,500
2. Rs. 1,600
3. Rs. 1,650
4. Rs. 1,750

Correct Option - 1

**Que. 57** Three partners, A, B and C shared profits in the ratio 2:3:4. A new partner D joined who took half of the shares of each A and C. If D's share of profit now is Rs. 100, find the total profit.

1. Rs. 200
2. Rs. 250
3. Rs. 275
4. Rs. 300

Correct Option - 4

**Que. 58** Each one of the following options consists of pairs of words. Choose the best pair to match with the pair in the question.

Doctor : Nurse

1. Judge : Lawyer
2. Owner : Stall
3. Chef : Waiter
4. Engineer : Driver

Correct Option - 1

**Que. 59** Select the alternative that is related to the third term in the same way as the second term is related to the first term.

PQR : UTS :: LMN : ?

1. OPQ
2. QPO
3. NML
4. PQO

Correct Option - 2

**Que. 60** Find the alternative that can be a member of the given group/class. Pathology, Radiology, Cardiology

1. Biology
2. Geology
3. Zoology
4. Hermatology

Correct Option - 4

**Que. 61** Find the missing number:  
1, 8, 27, 64, ?

1. 125
2. 135
3. 145
4. 155

Correct Option - 1

**Que. 62** Find the missing numbers (X and Y) in the series and find the value of Y-X:  
25, 26, 28, X, 35, Y, 46

1. 7
2. 8
3. 9
4. 10

Correct Option - 3

**Que. 63** Find the pair of the numbers that would fit into the pattern:  
32 3, 32 4, 32 12, 32 48, 32 240, ? ?

1. 32 1200
2. 32 1440
3. 32 1320
4. 64 1440

Correct Option - 2

**Que. 64** Which of the following series is built on the same logic as:  
C, E, G, K

1. M, Q, S, W
2. M, Q, S, X
3. M, O, Q, S
4. M, P, S, V

Correct Option - 3

**Que. 65** Fill the missing value in this series:  
C2BA, FE4D, IHG8, ?

1. JI6KL
2. L16KJ

3. MI6NO
4. O16NM

Correct Option - 2

---

**Que. 66** Which pair in the options will complete the following series:  
A, \_\_\_\_\_, I, P, \_\_\_\_\_

1. D, Y
2. D, Z
3. E, Y
4. E, X

Correct Option - 1

---

**Que. 67** X bicycled 15 km north, then 20 km to his left. At least, how many more kms does he need to bicycle to return to his original position?

1. 35 km
2. 15 km
3. 20 km
4. 25 km

Correct Option - 4

---

**Que. 68** Two cars start from a common point. The 1st car travels north 10km, turns left and goes ahead for 8 km, The 2nd car goes south for 5 km, turns right and travels 8 km. What is the distance between the cars?

1. 5 km
2. 10 km
3. 8 km
4. 15 km

Correct Option - 4

---

**Que. 69** X walks 3 km away from his starting point. He turns right and travels a further 8 km. He turns left and walks ahead, but notices that he is in the opposite direction of what he is supposed to be in. He started by walking towards east. In which direction is he supposed to go?

1. North
2. East
3. West
4. South

Correct Option - 3

---

**Que. 70** X travels 5 km north, turns right and covers 7 km. He then turns right and travels 5 km. In which direction is he going?

1. North
2. East
3. West
4. South

Correct Option - 4

**Que. 71** A statement is given below, followed by two conclusions- I and II. You have to consider the statement to be true even if it seems to be at variance with commonly known facts. You have to decide which of the given conclusions, if any, follows from the given statements

**Statement:** Company ABC has marketed the product with the following slogan: "Go ahead; purchase it if the price and quality are your considerations".

**Conclusion I:** The price of the product must be high.

**Conclusion II:** The product must be of a good quality.

1. Only conclusion I follows
2. Only conclusion II follows
3. Both I and II follow
4. Neither I nor II follows

Correct Option - 2

**Que. 72** A statement is given below, followed by two arguments, 1 and 2. You have to consider the statement to be true even if it seems to be at variance with commonly known facts. You have to decide which of the given arguments, if any, is strong and supports the given statements.

**Statement:** Should taxes be abolished in a developing country like India?

**Arguments 1:** No, taxes are a good source of Income for the government to take steps for the development of the country.

**Arguments 2.** Yes, these taxes are NOT used for the goodwill of the nation.

1. Only 1 argument is strong
2. Only 2 argument is strong
3. Both argument 1 and 2 are strong
4. Neither arguments 1 nor 2 is strong

Correct Option - 1

**Que. 73** Two statement are given below, followed by three conclusions, I, II and III. You have to consider the statement to be true even if it seems to be at variance with commonly known facts. You have to decide which of the given conclusions, if any, follows from the given statements.

**Statement 1:** Every man should have his identity card with him

**Statement 2:** That card should mention his blood group, complete address and telephone number for contact, in case of emergencies.

**Conclusion I:** Blood CANNOT be transfused until its group is mentioned in the card.

**Conclusion II:** No one is supposed to forget his phone number under any circumstances

**Conclusion III:** The police needs this information if the injury is fatal.

1. Only conclusion I follows
2. Only conclusion II follows
3. Only conclusion III follows
4. None of them follows

Correct Option - 3

**Que. 74** Which of the words CANNOT be formed by the letter of the word "CARABINER"?

1. Crab
2. Nine
3. Bare
4. Rice

Correct Option - 2

**Que. 75** Which of the following words does NOT have its vowels in an alphabetical order?

1. Aerious
2. Materious
3. Imperious
4. Facetious

Correct Option - 3

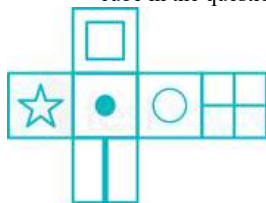
**Que. 76** Select the option that is related to the third word on the same basis as the second word is related to the first word.





Birds : Chirp :: Bear : ?

1. Growl
2. Gibber
3. Bleat
4. Grunt

Correct Option - 1

**Que. 77** Which of the following cubes in the answer figure CANNOT be made on the basis of the unfolded cube in the question figure?



1. 
2. 
3. 
4. 

Correct Option - 4

**Que. 78** Read the following information to answer the given questions.  
Following are the conditions for issuing a passport.

- A) The applicant must be born in the country or be married to a citizen of the country
- B) The applicant should possess the unique identity card for proof of name, address and age.
- C) The candidate should produce 12th pass certificate for education proof, if NOT a minor.
- D) A minor is under 18 years of age. A minor should possess the unique identity card of either parent.
- E) For reissue of passport applicant should submit old passport. For fresh issue applicant should submit affidavit. However, in case an applicant who fulfills all other criteria EXCEPT.
  - 1) A above, in case the applicant was born outside the country, the application is referred to passport head office.
  - 2) C above, if applicant has NOT passed 12th, the application is referred to passport Head Office.
  - 3) E above, in case the old passport is lost, the application will be treated as a fresh issue.

Based on these criteria and information provided below, decide the course of action in each case. You are NOT to assume anything

15-year-old Vijay was born in the country, has the unique identity card, has NOT yet passed his 12th and has his old passport. Only his mother has a unique identity card, but his father does NOT as he was NOT born in the country.

1. Allot Passport
2. Reject Passport
3. Refer to head office
4. Data inadequate

Correct Option - 1

**Que. 79** 21-year-old Sam is married to Rita who is a citizen of the country. He has the required affidavit for a fresh passport. He has the unique identity cards both of himself as well as his wife.

1. Allot Passport
2. Reject Passport
3. Refer to head office
4. Data inadequate

Correct Option - 4

**Que. 80** Seema has lost her old passport. She is 75 years old, was born outside the country and she does NOT have the unique identity card and is educated till the 10th. She has the affidavit.

1. Allot Passport
2. Reject Passport
3. Refer to head office
4. Data inadequate

Correct Option - 2

**Que. 81** Which of the following answer figure patterns can complete the series given in the question figure?



- 1.
- 2.
- 3.
- 4.

Correct Option - 3

**Que. 82** Which of the following answer figure patterns can complete the series given in the question figure?



- 1.
- 2.
- 3.
- 4.

Correct Option - 1

**Que. 83** What is the minimum number of lines required to make the given image?



1. 12
2. 13
3. 14
4. 11

Correct Option - 4

**Que. 84** If a mirror is placed on the line MN, then which of the answer figures is the right image of the given figure?



- 1.
- 2.
- 3.
- 4.

Correct Option - 3

**Que. 85** A piece of paper is folded and punched as shown below in the question figures. From the given answer figures, indicate how it will appear when opened.



- 1.
- 2.
- 3.



Correct Option - 3

**Que. 86** Arrange the following words as per their order in an English dictionary and choose the one that comes first.  
preview; pretence; previous; prettier

1. preview
2. prettier
3. previous
4. pretence

Correct Option - 4

**Que. 87** A series is given, with one word missing, Choose the correct alternative from the given ones that will complete the series.

Retina, National, Algebra, Radiator, ?

1. Apparel
2. Military
3. Ordinary
4. Barometer

Correct Option - 3

**Que. 88** A series is given, with one term missing, Choose the correct alternative from the given ones that will complete the series.

FED, HIJ, NML, PQR, VUT, ?

1. ZYX
2. WXY
3. XYZ
4. YXW

Correct Option - 3

**Que. 89** A series is given, with one word missing, Choose the correct alternative from the given ones that will complete the series.

EEEEEEFF, EEEEEFEF, EEEEEFEF, EEEFEEEF, EEEFEEEF, ?

1. EEFEEEF
2. EEEFEEFE
3. EEFEEEF

4. EEEFEEEEEF

Correct Option - 3

---

**Que. 90** A series is given, with one number missing. Choose the correct alternative from the given ones that will complete the series.

-6.2, -3.5, -0.8, ?, 4.6

1. 1.9
2. 1.7
3. 1.5
4. 1.6

Correct Option - 1

---

**Que. 91** If the 5th day of a month is Wednesday, which of the following would be the 2nd day after the 20th day of that month?

1. Wednesday
2. Sunday
3. Saturday
4. Thursday

Correct Option - 3

---

**Que. 92** A series is given, with one term missing. Choose the correct alternative from the given ones that will complete the series.

A0F5, B1F6, D1G6, G2I7, ?

1. L4LS
2. K3L8
3. K3M9
4. L4M9

Correct Option - 2

---

**Que. 93** In a code language, 639 means 'water is drink' 316 means 'juice is drink' and 219 means 'water or juice'. Find the code for 'or'.

1. 1
2. 2
3. 9
4. 3

Correct Option - 2

---

**Que. 94**

In a certain code. RICH is written as 4271 and SNOW is written as 8396. How is COIN written in that code?

1. 4547
2. 9035
3. 1901
4. 7923

Correct Option - 4

**Que. 95** If in a certain code language, '+' represents '×', '-' represents '+', '×' represents '÷' and '÷' represents '-'. Find out the answer of the following question.

$$9 - 3 + 1 \div 6 \times 2 = ?$$

1. 9
2. 8
3. 26
4. 5

Correct Option - 1

**Que. 96** If HELIPAD is coded as JGNKRCF, then how will BUY be coded as?

1. ACE
2. FHJ
3. DWA
4. KMO

Correct Option - 3

**Que. 97** If A @ B means A is the grandson of B, A # B means A is the wife of B and if A \* B means A is the father of B, then what does X \* Y @ Z # W mean, if Z has only 1 child?

1. W is the mother of X
2. W is the father of X
3. X is the mother of W
4. X is the father of W

Correct Option - 2

**Que. 98** If P % Q means P is the father of Q; P ! Q means P is the sister of Q and P \* Q means P is the daughter of Q, which of the following shows that I is the sister of K's husband?

1. I % G ! H \* K
2. I ! G % H \* K
3. I ! G \* H % K
4. I % G \* H ! K

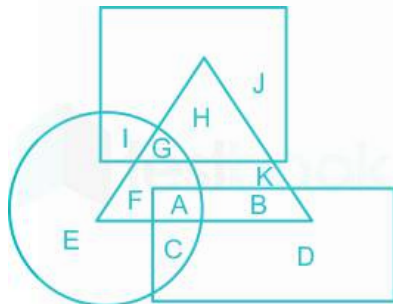
Correct Option - 2

**Que. 99** M said to N. "You are my daughter's father's mother's son." How is N related M if M is female?

1. N is the brother of M's husband
2. N is the father of M
3. N is the father-in-law of M
4. N is the son of M

Correct Option - 1

**Que. 100** In the following figure, the square represents accountants, the triangle represents artists, the circle represents planners and the rectangle represents men. Which set of letters represents men who are artists?




1. GH
2. GAF
3. AB
4. AC

Correct Option - 3

**Que. 101** Which of the following Venn diagrams best represents the relationship between Rajasthan, India and Asia?

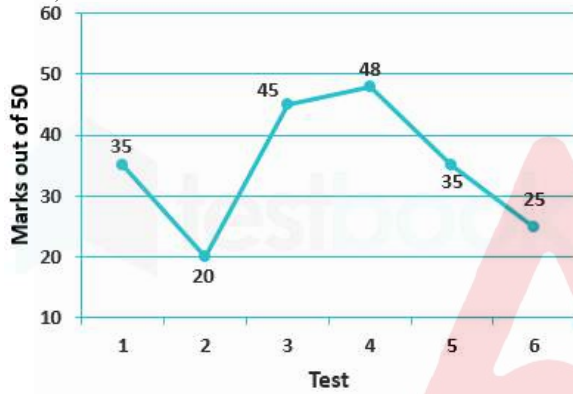
- 1.
- 2.
- 3.

4.



Correct Option - 2

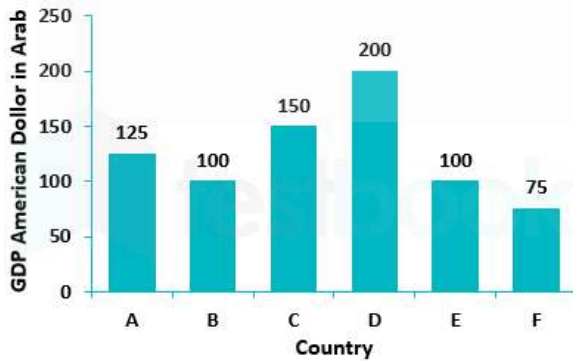
**Que. 102** Student enrolls for a 6 test series to \_\_\_\_\_ for an entrance exam. He plots \_\_\_\_\_ progress as a line graph. The line graph shows the marks he scored in these 6 tests. In how many tests his name was listed in the Hall of Fame? (Those students who score more than 40 get the honor of being listed in the Hall of Fame)



- 1. 2
- 2. 1
- 3. 3
- 4. 4

Correct Option - 1

**Que. 103** The bar graph shows GDP for the year 2017, in billion USD, of six countries which have united to form a free trade block, GDP of which country constitutes 1/5th of the total GDP of these 6 countries?



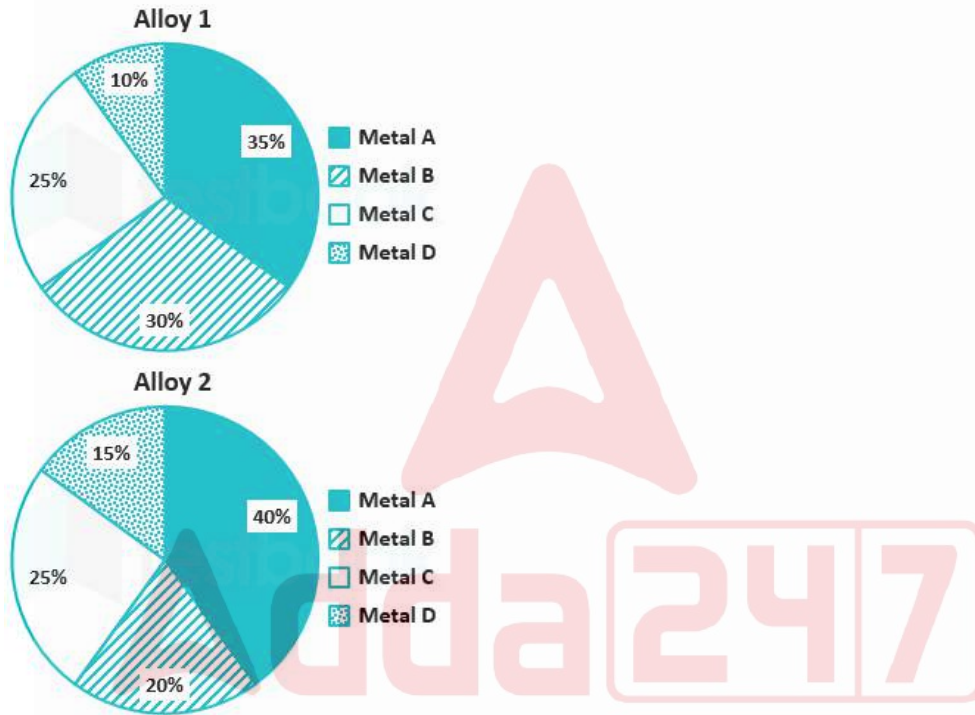
- 1. A

2. E
3. F
4. C

Correct Option - 4

**Que. 104** Alloy 1 and alloy 2 are prepared by mixing metals A, B, C and D. The pie charts show the proportions of these metals in the two alloys.

If 1 kg of alloy 1 and 2 kg of alloy 2 is melted and mixed, then the resulting alloy will contain what mass of metal B?



1. 700 g
2. 500 g
3. 70 g
4. 50 g

Correct Option - 1

**Que. 105** Which word does NOT belong with the others?

1. Blue
2. Green
3. Paint

4. Yellow





Correct Option - 3

**Que. 106** Find the odd letters from the given alternatives.

1. GEC
2. IKM
3. OQS
4. VXZ

Correct Option - 1

**Que. 107** Four figures have been given, out of which three are alike in some manner and one is different. Select the one that is different.

1. 
2. 
3. 
4. 

Correct Option - 1

**Que. 108** Four figures have been given, out of which three are alike in some manner and one is different. Select the one that is different.

1. 

I	N	W
Z	H	M
Q	T	O
2. 

W	M	Q
N	H	J
O	Z	T

3. 

H	Q	Z
N	O	W
I	M	T
4. 

M	T	I
Q	Z	O
W	N	H

Correct Option - 2

**Que. 109** Select the alternative that is related to the third term in the same way as the second term is related to the first term.

Necklace : Jewellery :: Pen : ?

1. Paper
2. Stationery
3. Writing
4. Book

Correct Option - 2

**Que. 110** Select the alternative that is related to the third term in the same way as the second term is related to the first term.

196 : 169 :: 2744 : ?

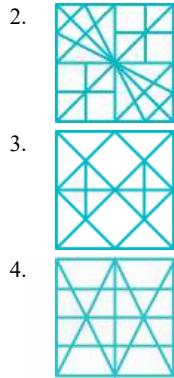
1. 4277
2. 2197
3. 2977
4. 4192

Correct Option - 2

**Que. 111** From the given answer figures, select the one in which the question figure is hidden embedded.

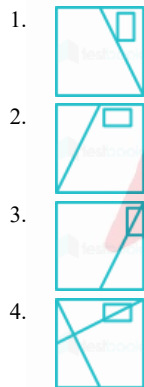


- 1.



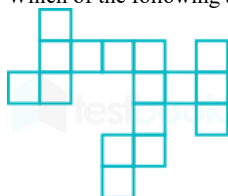
Correct Option - 1

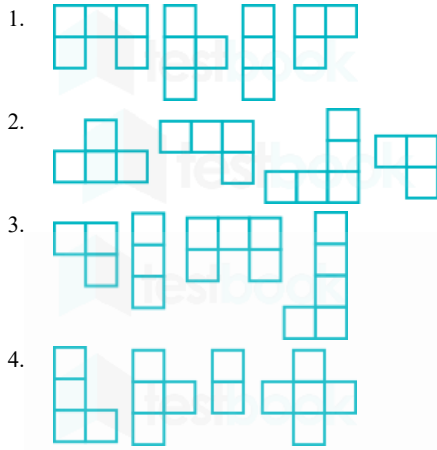
Que. 112 Which answer figure \_\_\_\_ compare are pattern in the question figure?



Correct Option - 4

Que. 113 Which of the following answer figure patterns can be combined to make the question figure?





Correct Option - 2

**Que. 114** प्रश्न में चार विकल्पों में से, उस का चयन करें जो निर्देशानुसार परिवर्तन वाला सही विकल्प है। बच्चों ने खेल खेला। (भविष्य काल)

1. बच्चे खेल, खेल चुके
2. बच्चे खेल रहे हैं
3. बच्चे खेल चुके होंगे
4. बच्चे खेल खेलेंगे

Correct Option - 4

**Que. 115** निम्नलिखित प्रश्न में चार विकल्प दिए गए हैं जिनमें से उस विकल्प का चयन करें जो दिए गए शब्द का सही स्त्रीलिंग शब्द है।

**राजपूत**

1. राजपूतानी
2. रजपूताई
3. राजपूतरीन
4. राजपूती

Correct Option - 1

**Que. 116** निम्नलिखित प्रश्न में चार विकल्प दिए गए हैं जिनमें से उस विकल्प का चयन करें जो दिए गए शब्द का सही स्त्रीलिंग शब्द है।

**तपस्वी**

1. तपस्विनी

2. तपस्वीनि
3. तपस्वीन
4. तपस्वी

Correct Option - 1

**Que. 117** नीचे दिए गए शब्द का सही बहुवचन रूप वाला विकल्प पहचानिए।

**तलवार**

1. तलवारें
2. तलवारों
3. तलवार
4. तलवारे

Correct Option - 1

**Que. 118** ह्रस्व व दीर्घ इनमें से किसके प्रकार हैं?

1. स्वर
2. व्यंजन
3. वर्णमाला
4. संयुक्त व्यंजन

Correct Option - 1

**Que. 119** इनमें से कौन सा ऊष्म व्यंजन है?

1. य
2. प
3. श
4. ट

Correct Option - 3

**Que. 120** दी गई जोड़ियों में कौन सी जोड़ी सही संज्ञा व उससे बनने वाले विशेषण शब्द की है?

1. पक्ष - पाक्षिक
2. प्रेम - प्यार
3. सुख - दुःख
4. स्वर्ण - सोना

Correct Option - 1

**Que. 121** सर्वनाम वाले वाक्यों में लिंग का पता किससे चलता है?

1. क्रिया
2. कर्म
3. कर्ता
4. वचन

Correct Option - 1

**Que. 122** जायसी द्वारा रचित प्रसिद्ध रचना कौन सी है?

1. पद्मावत
2. रस विलास
3. विज्ञानगीता
4. श्रृंगार लहरी

Correct Option - 1

**Que. 123** 'भारत दुर्दशा' किस प्रसिद्ध लेखक द्वारा रचित उपन्यास है?

1. वृन्दावनलाल शर्मा
2. देवकीनंदन खत्री
3. अयोध्या सिंह
4. भारतेन्दु हरिश्चंद्र

Correct Option - 4

**Que. 124** नीचे दी गई रचनाएँ किस कवि की हैं?

चिदंबर / उत्तरा / काला और बूढ़ा चाँद / पल्लव

1. सुमित्रानंदन पन्त
2. अज्ञेय
3. केदारनाथ सिंह
4. सुभद्रा कुमारी चौहान

Correct Option - 1

**Que. 125** सर्वेश्वर दयाल सक्सेना को किस रचना के लिए साहित्य अकादमी पुरस्कार दिया गया था?

1. खूंटियों पर टंगे लोग
2. जंगल का दर्द
3. क्या कह कर पुकारूँ
4. गर्म हवाएँ

Correct Option - 1

**Que. 126** नीचे दिए गए गद्यांश के बाद प्रश्न दिए गए हैं। इस गद्यांश को ध्यानपूर्वक पढ़ें और चार विकल्पों में से प्रत्येक प्रश्न का सर्वोत्तम उत्तर चुनें।

लगभग पांच शताब्दी पूर्व पुर्तगाली इतिहासकार डोमिंग पेस ने हम्पी (विजयनगर) को स्वप्नों की नगरी कहा था। यह संगम वंश के शासकों की राजधानी थी जिन्होंने 1336 में प्राचीन हम्पी के निर्माण स्थल पर विजय नगर साम्राज्य की नींव रखी थी। लेकिन वह कृष्णदेव राय (1509-1529) थे जिन्होंने भव्य महल और मंदिरों से राजधानी को अलंकृत किया और विजयनगर साम्राज्य की सीमाओं को दूर-दूर तक फैलाया जिससे वह दक्षिण भारत का सर्वाधिक शक्तिशाली हिन्दु साम्राज्य बना। परन्तु इस साम्राज्य की शक्ति का पतन पड़ोसी बहमई राज्यों के संघ के 1565 में संयुक्त आक्रमण से आरंभ हुआ। इस विजयनगर को परास्त करके नष्ट कर दिया गया। यह उस साम्राज्य का दुखत अंत था जो कभी अरब सागर से बंगाल की खाड़ी और दक्कन पठार से भारतीय प्रायद्वीप तक फैला था। विजयनगर के भग्नाशेष एक दूसरे पर टंगी विशाल चट्टानों की निर्जन दृश्यावली के बीच फैले हैं। दक्षिण भारत के राजनीतिक परिदृश्य में अपने उदय से पूर्व हम्पी कई शताब्दियों से एक प्रख्यात पावन स्थल था। रामायण में जैसा वर्णित है यह बाली शासित क्षेत्र किष्किन्धा का एक भाग था। इस स्थान में बाली और सुग्रीव, हनुमान, राम सीता, लक्ष्मण से जुड़ी अनेक घटनाएं घटी हैं। तुंगभद्रा नदी के पार स्थित वर्तमान एनीगोण्डी दुर्ग इस वानर साम्राज्य का प्रमुख केन्द्र था। हम्पी के चट्टानी पर्वत जैसे हेमकूट पर्वत, मातण्ग पर्वत और माल्यावंथ पर्वत का उल्लेख रामायण में मिलता है। तुंगभद्रा का प्राचीन नाम और पार्वती का नाम पम्पा है जिसने विरूपाक्ष रूपी शिव से विवाह किया था। इसी नाम पर इस नगरी का नाम पड़ा है।

किष्किन्धा का भाग किसके शासन का हिस्सा था?

1. बलि
2. बाली
3. कृष्णदेव राय
4. बहमई राज्यों

Correct Option - 2

**Que. 127** किसने हम्पी को स्वप्नों की नगरी कहा था?

1. ब्रिटिश इतिहासकार डोमिंग पेस
2. पुर्तगाली इतिहासकार डोमिंग पेस
3. वानर साम्राज्य के शासकों ने
4. पौराणिक पात्री ने

Correct Option - 2

**Que. 128** हम्पी साम्राज्य की शक्ति का पतन कैसे हुआ?

1. आपसी मनमुटाव
2. आपसी झगडा
3. संयुक्त आक्रमण
4. आपसी फूट

Correct Option - 3

**Que. 129** विजयनगर के भग्नाशेष कैसी दृश्यावली \_\_\_\_\_ बीच फैले है?

1. जनशून्य
2. भीड़भाड़
3. सघन
4. हरियाली

Correct Option - 1

**Que. 130** विरूपाक्ष का समानार्थी शब्द पहचानिए।

1. विलक्षण नेत्रों वाला
2. निर्जन
3. गुस्सैल स्वभाव वाला
4. शक्तिशाली

Correct Option - 1

**Que. 131** निम्नलिखित प्रश्न में चार विकल्पों में से, उस सही विकल्प का चयन करें जो दिए गए पद्य के उचित अलंकार रूप का सबसे अच्छा विकल्प है।

काली घटा का घमंड घटा

1. यमक अलंकार
2. अतिशयोक्ति अलंकार
3. उत्प्रेक्षा अलंकार
4. उमपा अलंकार

Correct Option - 1

**Que. 132** निम्नलिखित प्रश्न में चार विकल्पों में से उस सही विकल्प का चयन करें जो रेखांकित शब्दों के सही-अव्यय के भेद हो

दरवाजे के बाहर कोई खड़ा है।

1. समुच्चय बोधक अव्यय
2. विस्मयादिबोधक अव्यय
3. संबंधबोधक अव्यय
4. निपात

Correct Option - 3

**Que. 133** निम्नलिखित प्रश्न में चार विकल्पों में से, उस सही विकल्प का चयन करें जो अशुद्ध वाक्य के शुद्ध रूप का सबसे अच्छा विकल्प है।

मैंने गाँव जाना है।

1. मैं गाँव जाना है।
2. मुझे गाँव जाना है।
3. मेको गाँव जाना है।
4. मेरे को गाँव जाना है।

Correct Option - 2

**Que. 134** छंद में प्रयुक्त अक्षर को क्या कहा जाता है?

1. व्यंजन
2. चरण
3. मात्रा
4. वर्ण

Correct Option - 3

**Que. 135** निम्नलिखित प्रश्न में, चार विकल्पों में से, उस विकल्प का चयन करें जो दिए गए मुहावरे का सही अर्थ वाला विकल्प है।

लोहा मानना

1. मूर्ख बनाना
2. प्रभाव मानना
3. हार मानना
4. लाभ होना

Correct Option - 2

**Que. 136** रसों का राजा किस रस को माना जाता है?

1. करुण रस
2. शृंगार रस
3. वीर रस
4. हास्य रस

Correct Option - 2

**Que. 137** निम्नलिखित प्रश्न में, चार विकल्पों में से, उस सही विकल्प का चयन करें जो निर्देशानुसार वाक्य परिवर्तन वाला सही विकल्प है।

आप इस किताब को पढ़े है? (कर्मवाच्य)

1. इस किताब को आप के द्वारा पढ़ा गया है
2. क्या आपने इस किताब को पढ़ा
3. यह किताब आपके द्वारा पढ़ी गई

4. आपने यह किताब पढ़ी

Correct Option - 1

**Que. 138** किसी के द्वारा कहे गए वचन को ज्यों का त्यों लिखने के लिए किस चिह्न का प्रयोग किया जाता है?

1. योजक
2. उद्धरण
3. अल्प विराम
4. अर्ध विराम

Correct Option - 2

**Que. 139** निम्नलिखित प्रश्न में, चर विकल्पों में से दिए गए वो सही समास वाला विकल्प पहचानिये।

चंद्रशेखर

1. चन्द्र: है शिखर पर जिसके
2. चन्द्र: है जिसका नाम
3. चन्द्र के समान है जो
4. चन्द्र के जैसा है जो

Correct Option - 1

**Que. 140** निम्नलिखित प्रश्न में चार विकल्प दिए गए हैं जिनमें से उस विकल्प का चयन करें जो शब्द / वाक्य का सबसे सही 'एक शब्द' विकल्प है।

जिसका उत्साह नष्ट हो गया हो

1. उत्साही
2. उद्यमी
3. हतोत्साहित
4. जिज्ञासु

Correct Option - 3

**Que. 141** निम्नलिखित प्रश्न में, चार विकल्प दिए गए हैं जिनमें से एक शब्द दिए गए अनेकार्थी शब्द का एक अर्थ है। उस शब्द को चुनें।

जलज

1. जहाज
2. मछली
3. धतुर
4. हाथी

Correct Option - 2

**Que. 142** निम्नलिखित प्रश्न में, चार विकल्पों में से, उस सही विकल्प का चयन करें जो निम्न वाक्य का पूर्वकालिक क्रिया परिवर्तन वाक्य बताता है।

बच्चों ने गृहकार्य किया। वे खेलने लग गए।

1. बच्चे गृहकार्य किये बिना खेलने लग गए
2. बच्चे गृहकार्य के बिना खेलने गए
3. बच्चे गृहकार्य करके खेलने लगे
4. बच्चों ने गृहकार्य किया और खेलने गए

Correct Option - 3

**Que. 143** निम्नलिखित प्रश्न में, चार विकल्पों में से रेखांकित पद के उचित कारक को पहचानिये।  
हे प्रभु! रक्षा कीजिये।

1. सम्बोधन कारक
2. अधिकरण कारक
3. सम्बन्ध कारक
4. कर्म कारक

Correct Option - 1

**Que. 144** निम्नलिखित प्रश्न में, चार विकल्प दिए गए हैं, जिनमें से उस विकल्प का चयन करें जो शब्द का सबसे अच्छा विकल्प है।

पतन

1. पत्ता
2. गिरना
3. पुत्र
4. घर

Correct Option - 2

**Que. 145** निम्नलिखित प्रश्न में चार विकल्पों में से, उस विकल्प का चयन करें जो दिए गए शब्द का सही समान अर्थ वाला शब्द है।

नाश

1. तबाही
2. उत्कर्ष
3. उत्थान
4. नवीन

Correct Option - 1

**Que. 146** निम्नलिखित प्रश्न में, चार विकल्पों में से, उस विकल्प का चयन करें जो सही विकल्प है।  
उपसर्ग शब्द के \_\_\_\_\_ में लगते हैं।

1. अंत
2. आरंभ
3. क्रिया
4. आठ

Correct Option - 2

**Que. 147** निम्नलिखित प्रश्न में, चार विकल्प दिए गए हैं जिनमें से एक शब्द दिए गए शब्द का सही - तद्भव रूप है।  
कपोत

1. गाल
2. कबूतर
3. काम
4. काज

Correct Option - 2

**Que. 148** निम्नलिखित प्रश्न में, चार विकल्पों में से, उस विकल्प का चयन करें जो प्रत्यय से नहीं बना है।

1. चिकनाहट
2. चाँदनी
3. खटास
4. बखूबी

Correct Option - 4

**Que. 149** निम्नलिखित प्रश्न में, चार विकल्पों में से उस विकल्प का चयन करें जो सही संधि-विच्छेद वाला विकल्प है।  
उल्लास

1. उत् + लास
2. उल + लास
3. उल्ल + आस
4. उल + आलास

Correct Option - 1

**Que. 150** निम्नलिखित प्रश्न में, चार विकल्पों में से दिए गए शब्द के विपरीत अर्थ वाला विकल्प चुनिए।  
संयोग

Test

Prime

By Adda247

# Previous Year Papers PDF

PRACTICE MORE, SCORE HIGHER!



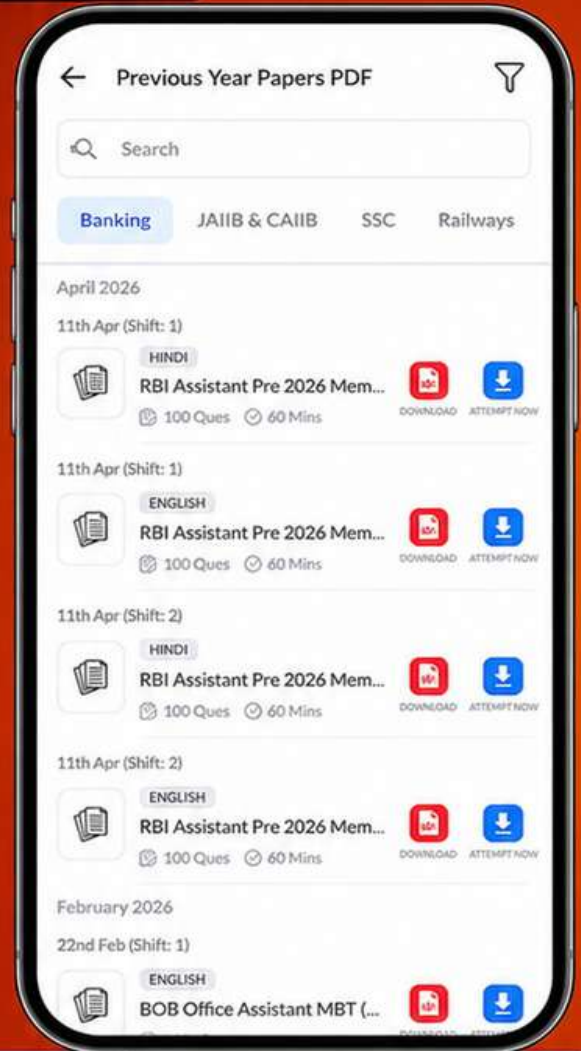
Free  
**25,000+**  
PDF's

High-Quality | Exam-Wise | Updated Regularly

ATTEMPT AS  
**MOCK**



Turn PDFs into real exam experience.  
Analyze. Improve. Succeed.



Topic-wise &  
Exam-wise PDFs



Download &  
Study Offline



Attempt as Mock  
& Track Score



Smart Analysis  
& Performance

AVAILABLE IN



Banking



SSC



Railway



Teaching



UGC



Agriculture



Nursing



Bihar



UP



Punjab



WB



Odisha



TN



AP & Telangana



Haryana



DOWNLOAD THE APP



1. वियोग
2. अवशेष
3. दुरुपयोग
4. मिलन

Correct Option - 1

