

OSSC ATO
Previous Year Paper
2016

Adda247

**Test
Prime**

By Adda247

ALL EXAMS, ONE SUBSCRIPTION



Test. Analyze. Improve. Repeat.



Don't just *prepare*. *Perform*.

Test Prime — built only for mock tests.



1,50,000+
Mock Tests



25,000+
Previous Year Papers



800+
Exam Covered



500% Refund
on Selection



5 lakh+
Free Quizzes



Daily
Free PDFs



Job Alerts
Stay Updated

- Multilingual
- Detailed Solution
- Strong and Weak Areas



**All India
Rankings**

Compete with lakhs.
Rank. Improve. Repeat.



← Adda247 test prime

Rating ▾

Editors' choice

New



Adda247 Test Prime
Adda Education • Education
📌 Installed



DOWNLOAD THE APP



ATRO – 2016 – Set – 2
TP for Diploma / Degree / MCA

3262

: INSTRUCTIONS TO CANDIDATES :

**THIS BOOKLET CONTAINS 100 QUESTIONS OF 1 MARK EACH IN 23 PAGES.
PLEASE CHECK THE QUESTION-SET BEFORE USE. IF ANY DEFECTS ARE
NOTICED, PLEASE BRING IT TO THE NOTICE OF THE INVIGILATOR.**

1. Read the instructions carefully before using the OMR answer sheet provided.
2. Fill in Part – A of the OMR answer sheet first, mentioning the Roll No., Set Code and other data as applicable in the place(s) indicated therein and darken the appropriate circles in blue or black ball point pen only.
3. While darkening the circle in Part – B of the OMR answer sheet, use blue or black ball point pen only. Use of pencil is not allowed in the Test. Darkening of more than one circle/option shall not be taken for evaluation.
4. Do not write any name/surname or put any symbol, sign, slogan, prayer or any mark of identification in Part – B of the OMR answer sheet. **Any such act is liable to render the answer sheet unfit for evaluation.**
5. Do not use any other form except the OMR answer sheet provided along with the question-set.
6. Do not tamper with the bar code or any other portion of the OMR answer sheet.
7. Candidates may use the blank sheet attached to these instructions for doing the rough work, if needed.
8. Do not attach any additional sheet or paper to the OMR answer sheet.
9. Return the OMR answer sheet **only** to the Invigilator before leaving the examination hall.
10. Candidates may take with them the respective question-sets after the examination is over.
11. Mobile Phone or any Communication Devices is not allowed inside the Examination Hall. The candidates are strictly advised **not to carry** any Mobile Phone or Communication Devices with them into the Examination Hall. Any candidate who is in **possession of Mobile Phone/Communication Devices** inside the Examination Hall is liable to be debarred from the valuation of his/her answer paper.
12. Violation of these instructions shall **entail disqualification of the candidate**.

ATRO – 2016 – Set – 2

TP for Diploma / Degree / MCA

Time : $1\frac{1}{2}$ hours

Full Marks : 100

Each question carries 1 mark.

Answer **all** questions, choosing the correct **one** from the alternatives suggested and darken the appropriate circle using **BLUE or BLACK BALL POINT PEN**.

1. If P is the force acting on the body, m is the mass of the body and a is the acceleration of the body, then according to Newton's second law of motion :
- (1) $P - ma = 0$
 (2) $P + ma = 0$
 (3) $P \times ma = 0$
 (4) $\frac{P}{ma} = 0$
 (5) $P \pm ma = 0$
2. A machine having an efficiency greater than 50%, is known as :
- (1) Ideal machine
 (2) Non-reversible machine
 (3) Reversible machine
 (4) Neither reversible nor non-reversible machine
 (5) None of these
3. The term 'centroid' is :
- (1) The point of suspension
 (2) The same as centre of gravity
 (3) The point of application of the resultant of all the forces tending to cause a body to rotate about a certain axis
 (4) The point at which the total mass of the body acts
 (5) None of these
4. A differential pulley block has larger and smaller diameters of 100 mm and 80 mm respectively. Its velocity ratio is :
- (1) 5
 (2) 10
 (3) 20
 (4) 40
 (5) 12

5. Non-coplanar concurrent force are those forces which :
- (1) Meet at one point, but their lines of action do not lie on the same plane
 - (2) Do not meet at one point and their lines of action do not lie on the same plane
 - (3) Meet at one point and their line of action also lie on the same plane
 - (4) Do not meet at one point, but their lines of action lie on the same plane
 - (5) None of these
6. The efficiency of a screw jack is maximum when (where α = Helix angle and ϕ = Angle of friction) :
- (1) $\alpha = 45^\circ + \frac{\phi}{2}$
 - (2) $\alpha = 45^\circ - \frac{\phi}{2}$
 - (3) $\alpha = 90^\circ + \phi$
 - (4) $\alpha = 90^\circ - \phi$
 - (5) $\alpha = 90^\circ + \frac{\phi}{2}$
7. According to Lami's theorem :
- (1) The three forces must be equal
 - (2) The three forces must be at 120° to each other
 - (3) The three forces must be in equilibrium
 - (4) If the three forces acting at a point are in equilibrium, then each force is proportional to the sine of the angle between the other two
 - (5) All of these
8. The slope on the road surface generally provided on the curves is known as :
- (1) Angle by repose
 - (2) Angle of banking
 - (3) Angle of friction
 - (4) Angle of limiting friction
 - (5) None of these
9. For a self locking machine, the efficiency must be :
- (1) Greater than 50%
 - (2) Less than 50%
 - (3) Equal to 50%
 - (4) Equal to 100%
 - (5) None of these

10. A couple produces :

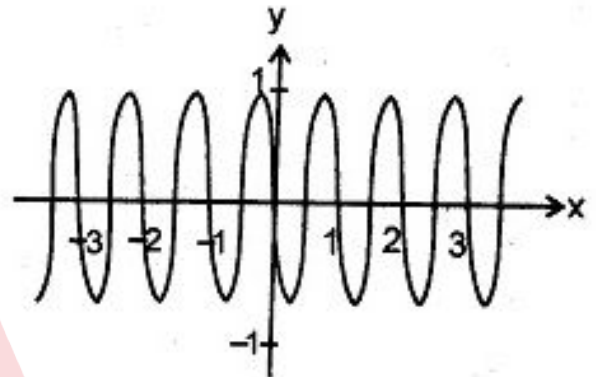
- (1) Translatory motion
- (2) Linear motion
- (3) Rotational motion
- (4) Combined translatory and rotational motion
- (5) None of these

- (2) $[-4, 8]$
- (3) $[0, 8]$
- (4) $[-6, 0]$
- (5) None of these

11. Which of the following functions has the greatest period ?

- (1) $f(x) = 20 \sin(2x - \pi/2)$
- (2) $f(x) = -\sin(\pi x)$
- (3) $f(x) = 2\sin(0.1x)$
- (4) $f(x) = -\sin(0.1\pi x)$
- (5) None of these

14. Which of the functions below correspond to the given graph ?



- (1) $y = -\sin(2\pi x)$
- (2) $y = \sin(2\pi x)$
- (3) $y = \cos(2\pi x)$
- (4) $y = -\sin(x)$
- (5) None of these

12. What is the amplitude of $f(x) = 4 \sin(x) \cos(x)$?

- (1) 4
- (2) 3
- (3) 2
- (4) 1
- (5) None of these

13. What is the range of the function

$$f(x) = -6\cos(\pi x - \pi/2) + 2$$

- (1) $[-6, 6]$

15. Let the closed interval $[a, b]$ be the domain of function f . The domain of $f(x - 3)$ is given by :

- (1) The open interval $[a, b]$
- (2) The closed interval $[a, b]$
- (3) The closed interval $[a - 3, b - 3]$
- (4) The closed interval $[a + 3, b + 3]$
- (5) None of these

16. If $f(x) = g(u)$ and $u = u(x)$, then :

- (1) $f'(x) = g'(u)$
- (2) $f'(x) = g'(u) \cdot u'(x)$
- (3) $f'(x) = u'(x)$
- (4) $f''(x) = u'(x)$
- (5) None of these

17. Equations $x = 3\cos t$ and $y = 3\sin t$ represent equation of :

- (1) Line
- (2) Circle
- (3) Parabola
- (4) Hyperbola
- (5) None of these

18. If $f(x) = x - 2$ and $g(x) = \sqrt{(x^2 + 1)}$, then $(g \circ f)(x) = ?$

- (1) $\sqrt{(x^2 + 1)} - 2$
- (2) $\sqrt{(x^2)} - 4x + 5$
- (3) $x^2 - 1$
- (4) $x^2 - 4x + 5$
- (5) None of these

19. Determine the equation of the circle whose radius is 5, centre on the line $x = 2$ and tangent to the line $3x - 4y + 11 = 0$:

- (1) $(x - 2)^2 + (y - 2)^2 = 5$
- (2) $(x - 2)^2 + (y + 2)^2 = 25$

- (3) $(x - 2)^2 + (y + 2)^2 = 5$
- (4) $(x - 2)^2 + (y - 2)^2 = 25$
- (5) None of these

20. Find the equation of the axis of symmetry of the function $y = 2x^2 - 7x + 5$:

- (1) $7x + 4 = 0$
- (2) $4x + 7 = 0$
- (3) $4x - 7 = 0$
- (4) $x - 2 = 0$
- (5) None of these

21. Point $P(x, y)$ moves with a distance from point $(0, 1)$ one-half of its distance from line $y = 4$. The equation of its locus is :

- (1) $2x^2 - 4y^2 = 5$
- (2) $4x^2 + 3y^2 = 12$
- (3) $2x^2 + 5y^3 = 3$
- (4) $x^2 + 2y^2 = 4$
- (5) None of these

22. What is the equation of the asymptote of the hyperbola ?

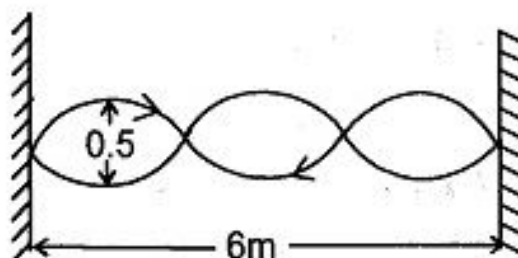
$$\frac{x^2}{9} - \frac{y^2}{4} = 1$$

- (1) $2x - 3y = 0$
- (2) $3x - 2y = 0$
- (3) $2x - y = 0$
- (4) $2x + y = 0$
- (5) None of these

23. Determine k so that the equation $4x^2 + kx + 1 = 0$ will have just one real solution :
- (1) 3
(2) 4
(3) 5
(4) 6
(5) None of these
24. What is the sum of the coefficients in the expansion $(x + y - z)^8$?
- (1) 0
(2) -1
(3) 2
(4) 3
(5) None of these
25. There are four balls of four different colors. Two balls are taken at a time and arranged in a definite order. For example, if a white and red balls are taken, one definite arrangement is white first, red second, and another arrangement is red first, white second. How many such arrangements are possible ?
- (1) 24
(2) 6
(3) 12
(4) 36
(5) None of these
26. How many 6-number combinations can be generated from the numbers from 1 to 42 inclusive, without repetition and with no regards to the order of the numbers ?
- (1) 850, 668
(2) 5, 245, 786
(3) 188, 848, 296
(4) 31, 474, 716
(5) None of these
27. The sum of two positive numbers is 50. What are the numbers if their product is to be the largest possible ?
- (1) 24 and 26
(2) 28 and 22
(3) 25 and 25
(4) 20 and 30
(5) None of these

28. The cost per hour of running a motor boat is proportional to the cube of the speed. At what speed will the boat run against a current of 8 km/hr in order to go a given distance most economically ?
- (1) 10 kph
 - (2) 13 kph
 - (3) 11 kph
 - (4) 12 kph
 - (5) None of these
29. Integrate $x \cos(2x^2 + 7) dx$:
- (1) $(1/4) \sin(2x^2 + 7) + C$
 - (2) $(1/4) \cos(2x^2 + 7) + C$
 - (3) $[(\sin \theta) / 4(x^2 + 7)] + C$
 - (4) $\sin(2x^2 + 7) + C$
 - (5) None of these
30. Evaluate the integral of $(\cos 3A)^8 dA$ from 0 to $\pi/6$:
- (1) $27\pi / 363$
 - (2) $35\pi / 768$
 - (3) $23\pi / 765$
 - (4) $12\pi / 81$
 - (5) None of these
31. Which of the following equation is an exact DE ?
- (1) $(x^2 + 1)dx - xy dy = 0$
 - (2) $x dy + (3x - 2y) dx = 0$
 - (3) $2xy dx + (2 + x^2) dy = 0$
 - (4) $x^2y dy - y dx = 0$
 - (5) None of these
32. What is the solution of the first order differential equation $y(k + 1) = y(k) + 5$?
- (1) $y(k) = 4 - 5/k$
 - (2) $y(k) = 20 + 5k$
 - (3) $y(k) = C - k$, where C is constant
 - (4) The solution is non-existence for real values of y
 - (5) None of these
33. Find the differential equation whose general solution is $y = C_1x + C_2e^x$:
- (1) $(x - 1)y'' - xy' + y = 0$
 - (2) $(x + 1)y'' - xy' + y = 0$
 - (3) $(x - 1)y'' + xy' + y = 0$
 - (4) $(x + 1)y'' + xy' + y = 0$
 - (5) None of these

34. Evaluate $\ln(2 + j3)$:
- (1) $1.34 + j0.32$
 - (2) $2.54 + j0.866$
 - (3) $2.23 + j0.21$
 - (4) $1.28 + j0.98$
 - (5) None of these
35. A sphere having a diameter of 30 cm is cut into 2 segments. The altitude of the first segment is 6 cm. What is the ratio of the area of the second segment to that of the first ?
- (1) 4 : 1
 - (2) 3 : 1
 - (3) 2 : 1
 - (4) 3 : 2
 - (5) None of these
36. Which physical quantity has the dimensional formula that of angular velocity ?
- (1) Time
 - (2) Frequency
 - (3) Displacement
 - (4) Acceleration
 - (5) None of these
37. A ball thrown vertically upwards with a velocity of 19.6 m/sec from the top of a tower, returns to the earth in 6 sec. What is the height of the tower ?
- (1) 46.8 m
 - (2) 48.6 m
 - (3) 58.8 m
 - (4) 54.6 m
 - (5) 56.4 m
38. A force of 98 N is required to pull a body of mass 100 kg over ice. What is the coefficient of friction ?
- (1) 1.5
 - (2) 0.1
 - (3) 2.5
 - (4) 0.4
 - (5) 0.45
39. The wave pattern is established in a string as shown in the given figure. The wave component of travelling wave is :



- (1) 0.25 m
- (2) 0.5 m
- (3) 1 m
- (4) 2 m
- (5) 4 m

40. Sound waves are always in _____ in nature.

- (1) Longitudinal
- (2) Transverse
- (3) Standing
- (4) Electromagnetic wave
- (5) None of these

(2) $1.2 \mu\text{F}$

(3) $3.2 \mu\text{F}$

(4) $4.7 \mu\text{F}$

(5) $5.9 \mu\text{F}$

41. The coefficient of linear expansion of a certain steel is $12 \times 10^{-6} \text{ }^\circ\text{C}^{-1}$. Then the coefficient of cubical expansion is _____

- (1) $12 \times 10^{-16} \text{ }^\circ\text{C}^{-1}$
- (2) $\frac{4\pi}{3}(12 \times 10^{-6} \text{ }^\circ\text{C}^{-1})$
- (3) $3 \times (12 \times 10^{-16} \text{ }^\circ\text{C}^{-1})$
- (4) 0.00012
- (5) None of these

43. Velocity of sound in fluid is proportional to :

(1) $T^{1/2}$

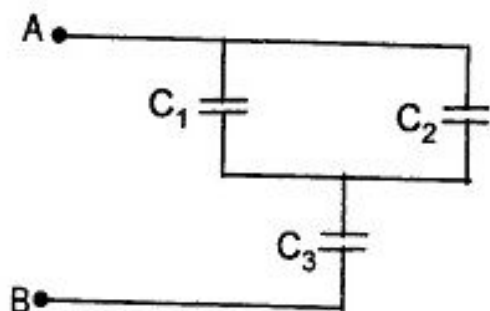
(2) $T^{-1/2}$

(3) T

(4) $\frac{1}{T}$

(5) T^2

42. What is the resultant capacitance between the points A and B in the given figure if $C_1 = 5 \mu\text{F}$, $C_2 = 10 \mu\text{F}$ and $C_3 = 4 \mu\text{F}$?



(1) $2.2 \mu\text{F}$

44. What will be the gravitational force of attraction between two neutrons whose centres are 10^{-12} m apart and mass of neutron is equal to $1.67 \times 10^{-27} \text{ kg}$?

(1) $1.7 \times 10^{-40} \text{ N}$

(2) $1.5 \times 10^{-40} \text{ N}$

(3) $2.7 \times 10^{-40} \text{ N}$

(4) $1.8 \times 10^{-40} \text{ N}$

(5) $1.6 \times 10^{-40} \text{ N}$

45. For total internal reflection phenomenon, the critical angle must be _____.

- (1) equal to 90°
- (2) less than 90°
- (3) greater than 90°
- (4) equal to 180°
- (5) less than 180°

46. The angle of projection ' θ ' = _____ for maximum range of a projectile.

- (1) 30°
- (2) 45°
- (3) 60°
- (4) 90°
- (5) 180°

47. What is the refractive index of glass medium w. r. t. water medium for a ray going from glass to water, where refractive index of glass and water are 1.62 and 1.32 respectively ?

- (1) 0.8148

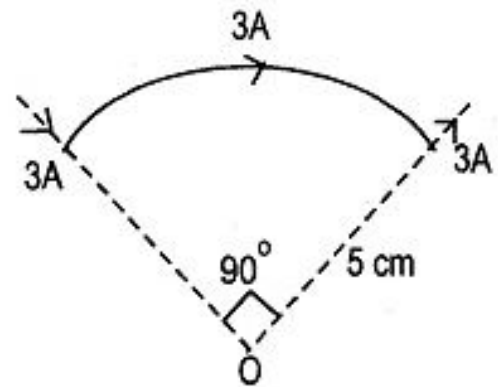
(2) 1.2273

(3) 1.8148

(4) 0.1228

(5) None of these

48. In the given fig the magnetic field at the centre 'O' of the given arc is :



(1) $9.43 \times 10^{-6} \text{ T}$

(2) $2.54 \times 10^{-3} \text{ T}$

(3) $5.82 \times 10^{-7} \text{ T}$

(4) $2.54 \times 10^{-6} \text{ T}$

(5) $1.46 \times 10^{-4} \text{ T}$

49. The electron-volt (ev) is the unit of :

(1) Energy

(2) Charge

(3) Current

(4) Potential

(5) Capacity

50. Out of the following, which option represents the Einstein's equation of photoelectric emission ?

(1) $\frac{1}{2}mV_{\min}^2 = h(f - f_0)$

(2) $\frac{1}{2}mV_{\max}^2 = h(f - f_0)$

(3) $\frac{1}{2}mV_{\min}^2 = h(f + f_0)$

(4) $\frac{1}{2}mV_{\max}^2 = h(f + f_0)$

(5) $\frac{1}{2}mV_{\min}^2 = h\left(\frac{f}{f_0}\right)$

51. A feather and a lead ball are dropped from rest in vacuum on the moon. The acceleration of the feather is :

(1) More than that of the lead ball

(2) Same that of the lead ball

(3) Less than that of the lead ball

(4) 9.8 m/s^2

(5) Zero, since it floats in the vacuum

52. Out of the following which is not a property of laser beam ?

(1) Directionality

(2) Coherence

(3) Diachromatic

(4) Highly directional

(5) Monochromaticity

53. If a particle executes simple harmonic motion of period 8 sec and amplitude 0.40 m, then its acceleration will be :

(1) 0.3142 m/s^2

(2) 0.3142 cm/s^2

(3) 0.2488 cm/s^2

(4) 0.2468 m/s^2

(5) None of these

54. The dimensional formula for universal gas constant (R) is :

(1) $[M^1L^{-2}T^{-2}K^{-1}]$

(2) $[M^1L^2T^{-2}K^{-1}]$

(3) $[M^1L^2T^{-1}K^{-1}]$

(4) $[M^1L^{-1}T^{-2}K^{-1}]$

(5) $[M^1L^2T^2K^{-1}]$

55. The inductance of a coil is directly proportional to :
- (1) Its strength
 - (2) The number of turns
 - (3) The resistance of the coil
 - (4) The square of number of turns
 - (5) None of these
56. A police man on duty detects a drop of 15% in the pitch of the horn of a motor car as it crosses him. If the velocity of sound is 330 m/s, the speed of the car is :
- (1) 26.4 m/s
 - (2) 26.2 cm/s
 - (3) 26.2 m/s
 - (4) 26.4 cm/s
 - (5) 26 cm
57. The force experienced by a charge particle moving inside a uniform magnetic field will be maximum by making angle _____ with magnetic field direction.
- (1) 0°
 - (2) 60°
 - (3) 90°
 - (4) 180°
 - (5) None of these
58. In photoelectric effect the stopping potential is :
- (1) Independent of frequency of incident light
 - (2) Independent of intensity of incident light
 - (3) Directly proportional to intensity of incident light
 - (4) Inversely proportional to frequency of incident light
 - (5) None of these
59. Out of the following which one is the example of observing both longitudinal and transverse wave at a time ?
- (1) Light wave
 - (2) Sound wave
 - (3) Sea water
 - (4) Earthquake
 - (5) Motion in a string

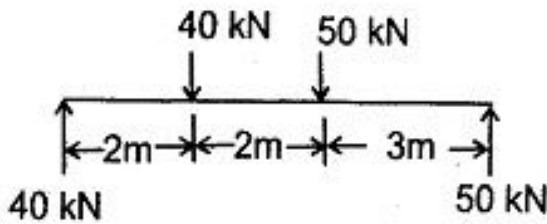
60. In case of inferior mirage the displaced image of the real and distant object always form :
- (1) Above the real object
 - (2) At the same level of real object
 - (3) Under the real object
 - (4) Behind of real object
 - (5) None of these
61. Electromagnetic radiation with maximum wavelength is :
- (1) Ultraviolet rays
 - (2) Radio waves
 - (3) X-rays
 - (4) Infra red rays
 - (5) Alpha rays
62. The hydride ion is isoelectronic with :
- (1) He
 - (2) Li
 - (3) Be^+
 - (4) He^+
 - (5) None of these
63. Which of the following is not a Lewis Acid ?
- (1) BF_3
 - (2) CuSO_4
 - (3) CO_3^{2-}
 - (4) AlCl_3
 - (5) PH_3
64. An oxide of a metal contains 40% oxygen. What will be its equivalent mass ?
- (1) 34
 - (2) 22
 - (3) 18
 - (4) 12
 - (5) 20
65. If 0.1 gm mole HCl is present in 1 ltr of solution, then the pH of solution is :
- (1) 7
 - (2) 0.1
 - (3) 1
 - (4) 0.01
 - (5) 8

66. Which of the following polymer can be used for lubrication and as an insulator ?
- (1) PTFE
 - (2) SBR
 - (3) PVC
 - (4) PAN
 - (5) GRS
67. CsCl crystallises in Body Centred Cubic lattice. If x is its edge length then which of the following expression is correct ?
- (1) $r_{\text{Cs}^+} + r_{\text{Cl}^-} = \sqrt{3}x$
 - (2) $r_{\text{Cs}^+} + r_{\text{Cl}^-} = 3x$
 - (3) $r_{\text{Cs}^+} + r_{\text{Cl}^-} = \frac{3x}{2}$
 - (4) $r_{\text{Cs}^+} + r_{\text{Cl}^-} = \sqrt{\frac{3x}{2}}$
 - (5) $r_{\text{Cs}^+} + r_{\text{Cl}^-} = \sqrt{\frac{2x}{3}}$
68. Camphor is often used in molecular mass determination, because :
- (1) It is readily available
 - (2) It has very high cryoscopic constant
 - (3) It is volatile
 - (4) It is a solvent for organic substances
 - (5) None of these
69. Molarity of 900 gm of water is :
- (1) 50 M
 - (2) 55.5 M
 - (3) 5 M
 - (4) 50.5 M
 - (5) Can not be calculated
70. Composition of gun metal is :
- (1) Fe 80%, Sn = 10%, Cr = 10%
 - (2) Fe = 50%, Ni = 21%, Al = 29%
 - (3) Cu = 87%, Sn = 10%, Zn = 3%
 - (4) Cu = 60 – 80%, Zn = 40 – 20%
 - (5) None of these
71. Lime-soda used for water softening is a mixture of :
- (1) Quick lime and Caustic soda
 - (2) Quick lime and Soda ash
 - (3) Slaked lime and Caustic soda
 - (4) Slaked lime and Soda ash
 - (5) None of these

72. Rust is a mixture of :
- (1) FeO and Fe(OH)_2
 - (2) FeO and Fe(OH)_3
 - (3) Fe_2O_3 and Fe(OH)_3
 - (4) Fe_3O_4 and Fe(OH)_3
 - (5) Fe_2O_3 and Fe(OH)_2
73. Which of the following 0.1M aqueous solution is likely to have the highest boiling point ?
- (1) Na_2SO_4
 - (2) KCl
 - (3) Glucose
 - (4) Urea
 - (5) $\text{C}_2\text{H}_5\text{OH}$
74. Molarity of liquid HCl having density 1.17 gm/cc is :
- (1) 36.5 M
 - (2) 18.25 M
 - (3) 32.05 M
 - (4) 42.10 M
 - (5) 30.56 M
75. In lead-acid battery during charging, the cathode reaction is :
- (1) Formation of PbO_2
 - (2) Formation of PbSO_4
 - (3) Reduction of Pb^{2+} to Pb
 - (4) Decomposition of Pb at anode
 - (5) None of these
76. All good gasolines have :
- (1) Higher octane number value
 - (2) Higher cetane number value
 - (3) Lower octane number value
 - (4) Lower cetane number value
 - (5) None of these
77. The time required to liberate 1 gm eq. of an element by passing 1 ampere current through its solution is :
- (1) 6.7 hours
 - (2) 13.4 hours
 - (3) 19.9 hours
 - (4) 26.8 hours
 - (5) 9.95 hours

78. Most commonly used food preservative is :
- (1) Table salt
 - (2) Sugar
 - (3) Vegetable oil
 - (4) Sodium benzoate
 - (5) All of these
79. Bakelite is obtained from Phenol by reaction with :
- (1) $(\text{CH}_2\text{OH})_2$
 - (2) CH_3CHO
 - (3) HCHO
 - (4) HCOOH
 - (5) CH_3COOH
80. Carboxy haemoglobin which restricts transport of oxygen in blood forms due to the increase of :
- (1) CO_2
 - (2) CH_3COOH
 - (3) CO
 - (4) HCHO
 - (5) CH_3COCH_3
81. Aromatic compounds must contain :
- (1) $(4\pi + 2)n$ electrons
 - (2) $(4\pi + 2)$ electrons
 - (3) $(4n + \pi)$ electrons
 - (4) $(4n + 2)\pi$ electrons
 - (5) $(4n + 2\pi)$ electrons
82. Substance which is weakly repelled by a magnetic field is :
- (1) O_2
 - (2) H_2O
 - (3) CrO_2
 - (4) Fe_3O_4
 - (5) ZnFe_2O_4
83. For which crystal anion-anion contact is valid ?
- (1) Na I
 - (2) Na F
 - (3) Cs Br
 - (4) Cs I
 - (5) KCl
84. Alkyl halides can be represented as :
- (1) $\text{C}_n \text{H}_{2n+1} - \text{OH}$
 - (2) $\text{C}_n \text{H}_{2n-2} - \text{X}$
 - (3) $\text{C}_n \text{H}_{2n} - \text{X}$
 - (4) $\text{C}_n \text{H}_{2n+2} - \text{X}$
 - (5) $\text{C}_n \text{H}_{2n+1} - \text{X}$

85. Monomers of BuNa – S are :
- (1) Styrene and acrylonitrile
 - (2) Butadiene and styrene
 - (3) Butadiene and chloroprene
 - (4) Butadiene and acrylonitrile
 - (5) Styrene and chloroprene
86. What is the magnitude of the parallel force systems shown in the figure ?

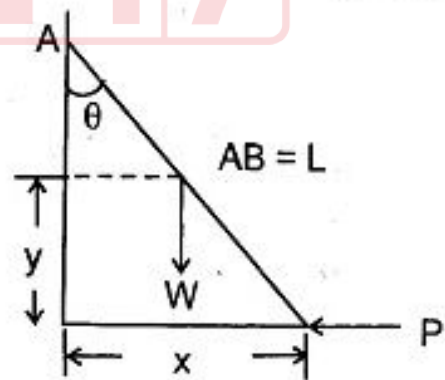


- (1) 70 kNm (clockwise)
 - (2) Zero
 - (3) 70 kNm (Anticlockwise)
 - (4) 90 kN vertical force and a moments of 70 kNm (clockwise)
 - (5) None of these
87. If two forces each of 10N act at an angle θ , then what is their resultant ?

- (1) $20 \cos \theta$
- (2) $20 \cos \frac{\theta}{2}$
- (3) $20 \cos 2\theta$
- (4) $20 \sin \frac{\theta}{2}$
- (5) $20 \sin 2\theta$

88. A solid sphere will be in stable equilibrium if its centre of gravity lies :
- (1) Vertically above its geometric centre
 - (2) Vertically below its geometric centre
 - (3) On the horizontal line through its centre
 - (4) At the centre
 - (5) None of these

89. A Ladder AB of weight W and length ℓ , is held in equilibrium by a horizontal force P as shown in the figure. Assuming the ladder to be idealized as a homogeneous rigid bar and the surfaces to be smooth, which one of the following is correct ?



- (1) $P = \frac{1}{2} w \tan \theta$
- (2) $P = \frac{1}{2} w \operatorname{cosec} \theta$
- (3) $P = \frac{1}{2} w \cos \theta$
- (4) $P = 2w \cos \theta$
- (5) $P = \frac{1}{2} w \cot \theta$

90. If a body of weight 100 N is hauled along a rough horizontal plane by a pull of 50 N acting at an angle of 30° with the horizontal, the coefficient of friction is :

- (1) $\frac{1}{2}$
 (2) $\frac{2}{\sqrt{3}}$
 (3) $\frac{1}{\sqrt{3}}$
 (4) $\sqrt{3}$
 (5) $\frac{4}{\sqrt{3}}$

91. A block of mass m is in equilibrium on a rough inclined plane inclined at angle α to the horizontal. If μ is the coefficient of friction between the plane and the block, what is the frictional force between the block and the plane ?

- (1) $\mu mg \sin \alpha$
 (2) $\mu mg \cos \alpha$
 (3) $mg \cos \alpha$
 (4) $\mu mg \sin 2\alpha$
 (5) $mg \sin \alpha$

92. A stone of mass m at the end of a string of length ℓ is whirled in a vertical circle at a constant speed. The tension in the string will be maximum when the stone is :

- (1) At the top of the circle
 (2) Half way down from the top
 (3) Quarter way down from the top
 (4) At the bottom of the circle
 (5) None of these

93. A mass m_1 with velocity v_1 impacts with a mass m_2 at rest. After the impact, the mass m_1 comes to rest. Then the coefficient of restitution e should be :

- (1) $e = \frac{m_1}{m_1 + m_2}$
 (2) $e = \frac{m_1 + m_2}{m_1}$
 (3) $e = \frac{m_2}{m_1 + m_2}$
 (4) $e = \frac{m_1}{m_2}$
 (5) $e = \frac{m_2}{m_1}$

94. A grinding wheel rotates at 3000 rpm. When power supply is cut off, the wheel stops completely in 10 seconds. What is the number of revolutions made by the wheel before coming to rest ?

- (1) 3000
- (2) 1000
- (3) 500
- (4) 250
- (5) 200

95. Centre of gravity of a solid circular cone from the circular base is at a distance of _____ (where r = base radius of the cone and h = altitude of the cone).

- (1) $\frac{1}{4}r$
- (2) $\frac{1}{4}h$
- (3) $\frac{2}{3}h$
- (4) $\frac{3}{8}r$
- (5) $\frac{1}{8}h$

96. Polar moment of inertia of a circular area of diameter D is :

- (1) $\frac{\pi}{64} D^4$
- (2) $\frac{\pi}{8} D^4$
- (3) $\frac{\pi}{128} D^4$
- (4) $\frac{\pi}{32} D^4$
- (5) $\frac{\pi}{16} D^4$

97. A car accelerates from rest to a speed of 10 m/s and the energy spent in doing this is E . If the car is further accelerated from 10 m/s to 20 m/s, what is the amount of energy to be spent further ?

- (1) E
- (2) $2E$
- (3) $3E$
- (4) $4E$
- (5) $5E$

Test

Prime

By Adda247

Previous Year Papers PDF

PRACTICE MORE, SCORE HIGHER!



Free
25,000+
PDF's

High-Quality | Exam-Wise | Updated Regularly

ATTEMPT AS
MOCK



Turn PDFs into real exam experience.
Analyze. Improve. Succeed.



Topic-wise &
Exam-wise PDFs



Download &
Study Offline



Attempt as Mock
& Track Score



Smart Analysis
& Performance

AVAILABLE IN



Banking



SSC



Railway



Teaching



UGC



Agriculture



Nursing



Bihar



UP



Punjab



WB



Odisha



TN



AP & Telangana



Haryana



DOWNLOAD THE APP



98. Two balls of equal mass and of perfectly elastic material are lying on the floor. One of the ball with velocity v is made to struck the second ball. Both the balls after impact will move a velocity :

- (1) v
- (2) $\frac{v}{2}$
- (3) $\frac{v}{4}$
- (4) $\frac{v}{8}$
- (5) 0

99. The range of a projectile is maximum, when the angle of projection is :

- (1) 30°
- (2) 45°
- (3) 60°
- (4) 90°
- (5) 0°

100. In an ideal machine, mechanical advantage is _____ velocity ratio.

- (1) equal to
- (2) greater than
- (3) less than
- (4) cannot be determined
- (5) None of these