



Odisha Sub-ordinate Staff Selection Commission
(OSSSC), Govt. of Odisha

Roll No.	
Application No.	
Participant Name	
Test Center Name	
Test Date	26/04/2026
Test Time	9:00 AM - 12:00 PM
Subject	Main Examination for the district cadre posts of RI ICDS Supervisor ARI Amin and SFS under Combined Recruitment Examination 2023 IV
Application Photograph	
Registration photograph	

*** Note**

Correct Answer will carry 1 mark per Question.

Incorrect Answer will carry 0.33 Negative mark per Question.

- Options shown in green color with a tick icon are correct.
- Chosen option on the right of the question indicates the option selected by the candidate.

Section : Mathematics

**Test
Prime**

By Adda247

ALL EXAMS, ONE SUBSCRIPTION



Test. Analyze. Improve. Repeat.



Don't just *prepare*. *Perform*.

Test Prime — built only for mock tests.



1,50,000+
Mock Tests



25,000+
Previous Year Papers



800+
Exam Covered



500% Refund
on Selection



5 lakh+
Free Quizzes



Daily
Free PDFs



Job Alerts
Stay Updated

- Multilingual
- Detailed Solution
- Strong and Weak Areas



**All India
Rankings**

Compete with lakhs.
Rank. Improve. Repeat.



← Adda247 test prime

Rating ▾

Editors' choice

New



Adda247 Test Prime
Adda Education • Education
📌 Installed



DOWNLOAD THE APP



Q.1 A and B working together can do a piece of work in 6 days. B alone can do the same work in 15 days. How long (in days) will A alone take to do thrice the work?2561

Ans 1. 90

2. 30

3. 60

4. 120

Question Type : MCQ

Question ID : 441009518845

Option 1 ID : 4410092030801

Option 2 ID : 4410092030799

Option 3 ID : 4410092030800

Option 4 ID : 4410092030802

Status : Answered

Chosen Option : 2

Q.2 Sachin purchased 10 kg of rice at the rate of ₹36 per kg and 32 kg of rice at ₹46 per kg. He sold the whole mixture at the rate of ₹42.5 per kg. Find his loss (in ₹).

Ans 1. 42

2. 52

3. 47

4. 55

Question Type : MCQ

Question ID : 441009277557

Option 1 ID : 4410091078189

Option 2 ID : 4410091078188

Option 3 ID : 4410091078187

Option 4 ID : 4410091078190

Status : Answered

Chosen Option : 3

Q.3 What sum of money (in ₹) will amount to ₹4800 at 4% per annum simple interest in 5 years?⁶⁹³⁰

Ans 1. 4050

2. 4000

3. 24000

4. 3950

Question Type : MCQ

Question ID : 441009570504

Option 1 ID : 4410092237138

Option 2 ID : 4410092237136

Option 3 ID : 4410092237139

Option 4 ID : 4410092237137

Status : Answered

Chosen Option : 3

Q.4 A, B and C started a business with their investment in the ratio of 2 : 3 : 4. Find the difference between the share of B and share of C from the total annual profit of ₹46,800.

Ans 1. ₹5,300

2. ₹5,500

3. ₹5,100

4. ₹5,200

Question Type : MCQ

Question ID : 441009339773

Option 1 ID : 4410091325128

Option 2 ID : 4410091325129

Option 3 ID : 4410091325126

Option 4 ID : 4410091325127

Status : Answered

Chosen Option : 4

Q.5	What is the capacity (in litres) of a conical flask having base dia (Use $\pi = 3.14$)
Ans	✓ 1. 25.12
	✗ 2. 50.42
	✗ 3. 25.21
	✗ 4. 50.24

Question Type :	MCQ
Question ID :	4410091758514
Option 1 ID :	4410096934199
Option 2 ID :	4410096934198
Option 3 ID :	4410096934200
Option 4 ID :	4410096934197
Status :	Answered
Chosen Option :	1

Q.6	There are 180 boys and 240 girls. The teacher wants to arrange them in such a way that each row has the same number of students, with only boys or only girls in a row. What is the maximum number of students that can be in each row?
Ans	✗ 1. 80
	✗ 2. 30
	✓ 3. 60
	✗ 4. 20


Question Type :	MCQ
Question ID :	44100910848
Option 1 ID :	44100943177
Option 2 ID :	44100943175
Option 3 ID :	44100943174
Option 4 ID :	44100943176
Status :	Answered
Chosen Option :	3

Q.7	Two parallel chords are drawn in a circle of diameter 20 cm. The length of one chord is 16 cm and the distance between the two chords is 12 cm. Find the length (in cm) of the other chord.
Ans	<input checked="" type="checkbox"/> 1. 12 <input checked="" type="checkbox"/> 2. 16 <input checked="" type="checkbox"/> 3. 10 <input checked="" type="checkbox"/> 4. 14

Question Type :	MCQ
Question ID :	441009592599
Option 1 ID :	4410092325514
Option 2 ID :	4410092325516
Option 3 ID :	4410092325513
Option 4 ID :	4410092325515
Status :	Answered
Chosen Option :	2

Q.8	A car can travel 600 km in a full tank of petrol, whose capacity is 48 liters. Find the distance travelled by car with 31 liters of petrol.
Ans	<input checked="" type="checkbox"/> 1. 390.0 km <input checked="" type="checkbox"/> 2. 377.2 km <input checked="" type="checkbox"/> 3. 387.5 km <input checked="" type="checkbox"/> 4. 385.5 km

Question Type :	MCQ
Question ID :	4410091002123
Option 1 ID :	4410093960206
Option 2 ID :	4410093960205
Option 3 ID :	4410093960203
Option 4 ID :	4410093960204
Status :	Answered
Chosen Option :	3



Q.9 A shopkeeper fixes the marked price of an item 70% above its cost price. What percentage of discount on marked price should be allowed to gain 19%?346

Ans 1. 28%

2. 33%

3. 29%

4. 30%

Question Type : MCQ

Question ID : 441009577250

Option 1 ID : 4410092264129

Option 2 ID : 4410092264127

Option 3 ID : 4410092264128

Option 4 ID : 4410092264126

Status : Answered

Chosen Option : 4

Q.10 Manish's average earning per month in the first three months of a year was ₹39416. In April, his earning was 50% more than the average earning in the first three months. If his average earning per month for the whole year is ₹58939, then what will be Manish's average earning (in ₹) per month from May to December?5917

Ans 1. 66237

2. 66240

3. 66242

4. 66235

Question Type : MCQ

Question ID : 441009582821

Option 1 ID : 4410092286410

Option 2 ID : 4410092286411

Option 3 ID : 4410092286413

Option 4 ID : 4410092286412

Status : Answered

Chosen Option : 2

Q.11 A shopkeeper offers a scheme: 'Buy 26 chocolates and get 4 chocolates free'. What is the effective discount percentage equivalent to this scheme?

Ans 1. $13\frac{3}{5}\%$

2. $13\frac{1}{3}\%$

3. $12\frac{3}{5}\%$

4. $12\frac{1}{3}\%$

Question Type : MCQ

Question ID : 4410091758449

Option 1 ID : 4410096933944

Option 2 ID : 4410096933943

Option 3 ID : 4410096933942

Option 4 ID : 4410096933941

Status : Answered

Chosen Option : 2

Q.12 Aman can complete a job in 28 days, while Ravi can complete the same job in 49 days. If both work together, how many days will they take to finish the work?

Ans 1. $15\frac{9}{11}$

2. $17\frac{9}{11}$

3. 17

4. 15

Question Type : MCQ

Question ID : 4410091762285

Option 1 ID : 4410096949142

Option 2 ID : 4410096949144

Option 3 ID : 4410096949143

Option 4 ID : 4410096949141

Status : Answered

Chosen Option : 2

Q.13 Three numbers are in the ratio 4 : 7 : 11, and their LCM is 3696. Their HCF is:8567

- Ans
- 1. 9
 - 2. 61
 - 3. 15
 - 4. 12

Question Type : MCQ

Question ID : 441009524851

Option 1 ID : 4410092054826

Option 2 ID : 4410092054824

Option 3 ID : 4410092054825

Option 4 ID : 4410092054823

Status : Answered

Chosen Option : 4

Q.14 The volume of a cuboid is 3150 cm^3 . Its length is 28 cm and breadth is 15 cm. Find its height (in cm).

- Ans
- 1. 7
 - 2. 8.5
 - 3. 8
 - 4. 7.5

Question Type : MCQ

Question ID : 4410091762711

Option 1 ID : 4410096950839

Option 2 ID : 4410096950842

Option 3 ID : 4410096950841

Option 4 ID : 4410096950840

Status : Answered

Chosen Option : 4

Q.15 A boat travels 60 km downstream and 60 km upstream in 16 hours. If the speed of the stream is 2 km/h, what is the speed of the boat (in km/h) in still water?

Ans 1. 12

2. 9

3. 8

4. 10

Question Type : **MCQ**

Question ID : **4410091758406**

Option 1 ID : **4410096933772**

Option 2 ID : **4410096933770**

Option 3 ID : **4410096933769**

Option 4 ID : **4410096933771**

Status : **Answered**

Chosen Option : **3**

Q.16 What smallest number should be added to 86072 so that the sum is completely divisible by 80?2840

Ans 1. 11

2. 9

3. 8

4. 10

Question Type : **MCQ**

Question ID : **441009560251**

Option 1 ID : **4410092196273**

Option 2 ID : **4410092196272**

Option 3 ID : **4410092196271**

Option 4 ID : **4410092196274**

Status : **Answered**

Chosen Option : **3**



Q.17 A boat takes 3 hours to travel 24 km downstream and 8 hours to travel 16 km upstream. What is the speed (in km/h) of the stream?

Ans 1. 3

2. 1

3. 2

4. 4

Question Type : MCQ

Question ID : 4410091758397

Option 1 ID : 4410096933735

Option 2 ID : 4410096933733

Option 3 ID : 4410096933734

Option 4 ID : 4410096933736

Status : Answered

Chosen Option : 1

Q.18 Which of the options below is equivalent to $729x^3 + 1331y^3 + 2673x^2y + 3267xy^2$?

Ans 1. $(9x + 14y)^3$

2. $(9x + 11y)^3$

3. $(11x + 9y)^3$

4. $(9x + 13y)^3$

Question Type : MCQ

Question ID : 4410091124014

Option 1 ID : 4410094431620

Option 2 ID : 4410094431617

Option 3 ID : 4410094431618

Option 4 ID : 4410094431619

Status : Answered

Chosen Option : 2

Q.19 If the compound interest on a sum of ₹y at 10% per annum compounded annually for 2 years is ₹735, then the total amount payable at the end of the two-year period will be _____.

Ans 1. ₹3868

2. ₹4568

3. ₹3913

4. ₹4235

Question Type : MCQ

Question ID : 441009571627

Option 1 ID : 4410092241629

Option 2 ID : 4410092241630

Option 3 ID : 4410092241631

Option 4 ID : 4410092241628

Status : Answered

Chosen Option : 4

Q.20 In what ratio must a grocer mix two varieties of rice worth ₹49 per kg and ₹119 per kg so that if he sells the mixture at ₹144 per kg he may gain 60%?

Ans 1. 31:42

2. 30:43

3. 31:44

4. 29:41

Question Type : MCQ

Question ID : 441009580104

Option 1 ID : 4410092275544

Option 2 ID : 4410092275543

Option 3 ID : 4410092275545

Option 4 ID : 4410092275542

Status : Not Answered

Chosen Option : --

Q.21 The sum of the present ages of a father and his son is 15 years more than 3 times the present age of the son. After 5 years from now, 2 times the father's age will be 10 years less than 5 times the son's age. The difference (in years) between the ages of the father and the son is:

- Ans
- 1. 44
 - 2. 35
 - 3. 40
 - 4. 32

Question Type :	MCQ
Question ID :	4410091221679
Option 1 ID :	4410094820141
Option 2 ID :	4410094820140
Option 3 ID :	4410094820139
Option 4 ID :	4410094820142
Status :	Answered
Chosen Option :	3

Q.22 The current population of a town is 16425. It increases by 20% and 60% in two successive years but decreases by 25% in the third year. What is the population of the town at the end of the third year?8053

- Ans
- 1. 23653
 - 2. 23652
 - 3. 23662
 - 4. 23644

Question Type :	MCQ
Question ID :	441009859335
Option 1 ID :	4410093390314
Option 2 ID :	4410093390312
Option 3 ID :	4410093390315
Option 4 ID :	4410093390313
Status :	Answered
Chosen Option :	2

Q.23 What is the correct ascending order of the following ratios: 5:11, 7:9, 31:33, 25:27?

Ans 1. 5:11, 25:27, 7:9, 31:33

2. 5:11, 7:9, 25:27, 31:33

3. 7:9, 5:11, 25:27, 31:33

4. 5:11, 7:9, 31:33, 25:27

Question Type : MCQ

Question ID : 4410091758482

Option 1 ID : 4410096934072

Option 2 ID : 4410096934069

Option 3 ID : 4410096934070

Option 4 ID : 4410096934071

Status : Answered

Chosen Option : 2

Q.24 What is the value of the following expression?

$\cot 22^\circ \times \cot 43^\circ \times \cot 45^\circ \times \cot 47^\circ \times \cot 68^\circ$

Ans 1. 3

2. 0

3. -1

4. 1

Question Type : MCQ

Question ID : 441009592742

Option 1 ID : 4410092326086

Option 2 ID : 4410092326087

Option 3 ID : 4410092326085

Option 4 ID : 4410092326088

Status : Answered

Chosen Option : 4

Q.25 In a competitive examination, Ramu scores 86 marks in Mathematics and 78 marks in Statistics, each out of 100. If the weight assigned to Mathematics is 1 and the weight assigned to Statistics is 3, then what is Ramu's weighted average score?

Ans 1. 82

2. 80

3. 81

4. 79

Question Type :	MCQ
Question ID :	4410091758416
Option 1 ID :	4410096933812
Option 2 ID :	4410096933810
Option 3 ID :	4410096933811
Option 4 ID :	4410096933809
Status :	Answered
Chosen Option :	2

Q.26 Simplify: $2\left(\left(\frac{3}{2}\right)x^2 - 26x + 12\right) - 3(x^2 + 9x - 11)$

Ans 1. $-79x + 57$

2. $79x - 57$

3. $79x + 57$

4. $-79x - 57$

Question Type :	MCQ
Question ID :	4410091226902
Option 1 ID :	4410094841091
Option 2 ID :	4410094841092
Option 3 ID :	4410094841094
Option 4 ID :	4410094841093
Status :	Answered
Chosen Option :	1

Q.27 The equation $ax^2 + bx + c = 0$ has imaginary roots. The constants a, b and c are three consecutive natural numbers. We may take a, b and c in ascending or descending order, the roots are still imaginary. What can be the smallest value of a?

- Ans
- 1. 1
 - 2. 2
 - 3. 4
 - 4. 3

Question Type :	MCQ
Question ID :	4410091226443
Option 1 ID :	4410094839256
Option 2 ID :	4410094839257
Option 3 ID :	4410094839255
Option 4 ID :	4410094839258
Status :	Answered
Chosen Option :	2

Q.28 What is the minimum value that must be assigned to A so that the 8-digit number 447A3439 is divisible by 11?

- Ans
- 1. 3
 - 2. 2
 - 3. 4
 - 4. 0

Question Type :	MCQ
Question ID :	441009833491
Option 1 ID :	4410093287080
Option 2 ID :	4410093287082
Option 3 ID :	4410093287081
Option 4 ID :	4410093287083
Status :	Answered
Chosen Option :	4

Q.29 The present cost of a plot area is ₹1,51,726. After a year, its cost increased to ₹1,96,537. The percentage increase (rounded off to the nearest integer) in the cost of the plot area is:

Ans 1. 43%

2. 28%

3. 30%

4. 35%

Question Type : MCQ

Question ID : 441009237565

Option 1 ID : 441009928629

Option 2 ID : 441009928631

Option 3 ID : 441009928628

Option 4 ID : 441009928630

Status : Answered

Chosen Option : 2

Q.30 Evaluate: $[(4 \times 2) - (12 \div 6)] + 8$

Ans 1. 15

2. 13

3. 16

4. 14

Question Type : MCQ

Question ID : 441009835962

Option 1 ID : 4410093296966

Option 2 ID : 4410093296965

Option 3 ID : 4410093296967

Option 4 ID : 4410093296964

Status : Answered

Chosen Option : 4

Q.31 If the sum of roots of $4x^2 - kx + 12 = 0$ is 5, find the value of k.

Ans 1. 10

2. 20

3. 15

4. 16

Question Type : MCQ

Question ID : 4410091075477

Option 1 ID : 4410094239399

Option 2 ID : 4410094239402

Option 3 ID : 4410094239400

Option 4 ID : 4410094239401

Status : Not Answered

Chosen Option : --

Q.32 Let C be a circle with centre O and PQ be an arc on C which is 10 cm long. If the circumference of the circle is 120 cm, find the angle made by the arc PQ at O.

Ans 1. 18°

2. 30°

3. 25°

4. 28°

Question Type : MCQ

Question ID : 441009280532

Option 1 ID : 4410091090089

Option 2 ID : 4410091090088

Option 3 ID : 4410091090090

Option 4 ID : 4410091090087

Status : Answered

Chosen Option : 2

Q.33 Three numbers x, y, and z are such that $x:y = 2:5$, $y:z = 6:7$ and $x + y + z = 308$. What is the fourth proportional of these three numbers?

Ans 1. 350

2. 340

3. 335

4. 345

Question Type : MCQ

Question ID : 4410091756969

Option 1 ID : 4410096928488

Option 2 ID : 4410096928486

Option 3 ID : 4410096928485

Option 4 ID : 4410096928487

Status : Answered

Chosen Option : 1

Q.34 What is the capacity (in litres) of a cylindrical vessel having bas

(Use $\pi = \frac{22}{7}$)

Ans 1. 48.125

2. 48.25

3. 48.375

4. 48.5

Question Type : MCQ

Question ID : 4410091762729

Option 1 ID : 4410096950911

Option 2 ID : 4410096950912

Option 3 ID : 4410096950913

Option 4 ID : 4410096950914

Status : Answered

Chosen Option : 1

Q.35 A shopkeeper purchased 22 dozens of articles at the rate of ₹300 per dozen. He sold each one of them at the rate of ₹39. What percentage profit did he make?3602

Ans 1. 55%

2. 58%

3. 53%

4. 56%

Question Type : MCQ

Question ID : 441009567176

Option 1 ID : 4410092223826

Option 2 ID : 4410092223825

Option 3 ID : 4410092223827

Option 4 ID : 4410092223824

Status : Answered

Chosen Option : 4

Q.36 The cost of 5 pens and 6 notebooks is ₹92. The cost of 5 notebooks exceeds the cost of 3 pens by ₹48. What is the cost of 4 pens and 8 notebooks?27

Ans 1. ₹112

2. ₹113

3. ₹115

4. ₹109

Question Type : MCQ

Question ID : 4410091123921

Option 1 ID : 4410094431245

Option 2 ID : 4410094431247

Option 3 ID : 4410094431246

Option 4 ID : 4410094431248

Status : Not Answered

Chosen Option : --

Q.37 Given that $61^{0.41} = x$, $61^{0.15} = y$ and $x^z = y^3$, then the value of z is close to:3068

Ans 1. 0.87

2. 1.79

3. 2.81

4. 1.1

Question Type : **MCQ**

Question ID : **441009536593**

Option 1 ID : **4410092101769**

Option 2 ID : **4410092101771**

Option 3 ID : **4410092101770**

Option 4 ID : **4410092101768**

Status : **Not Answered**

Chosen Option : --

Q.38 Convert the following expression into a vulgar fraction:
 $0.47 + 5.2$

Ans 1. $\frac{51}{10}$

2. $\frac{57}{9}$

3. $\frac{51}{9}$

4. $\frac{57}{10}$

Question Type : **MCQ**

Question ID : **441009358080**

Option 1 ID : **4410091398298**

Option 2 ID : **4410091398299**

Option 3 ID : **4410091398301**

Option 4 ID : **4410091398300**

Status : **Answered**

Chosen Option : **3**


Q.39	Simplify $\frac{2^5 \times 4^3}{8^2 \times 2^3}$.
Ans	<input checked="" type="checkbox"/> 1. 4 <input type="checkbox"/> 2. 1 <input type="checkbox"/> 3. 16 <input type="checkbox"/> 4. 8

Question Type :	MCQ
Question ID :	4410097390
Option 1 ID :	44100929302
Option 2 ID :	44100929303
Option 3 ID :	44100929301
Option 4 ID :	44100929300
Status :	Answered
Chosen Option :	1

Q.40	A regular hexagon has a side length of 22 cm. Find its area (in cm^2) (Use $\sqrt{3} = 1.7$)
Ans	<input checked="" type="checkbox"/> 1. 1234.2 <input type="checkbox"/> 2. 1324.2 <input type="checkbox"/> 3. 1324.1 <input type="checkbox"/> 4. 1234.1

Question Type :	MCQ
Question ID :	4410091762537
Option 1 ID :	4410096950150
Option 2 ID :	4410096950152
Option 3 ID :	4410096950151
Option 4 ID :	4410096950149
Status :	Answered
Chosen Option :	1

Section : General Studies



Q.41 Who was elected President of the United Nations General Assembly in June 2025?

Ans 1. Annalena Baerbock

2. António Guterres

3. María Fernanda Espinosa

4. Volker Türk

Question Type : MCQ

Question ID : 4410091327482

Option 1 ID : 4410095241460

Option 2 ID : 4410095241458

Option 3 ID : 4410095241459

Option 4 ID : 4410095241457

Status : Answered

Chosen Option : 2

Q.42 Which ancient text is considered a major landmark in the history of Indian music and contains chapters on music, drama and dance?

Ans 1. Brihaddesi

2. Natya Shastra

3. Rig Veda

4. Sangeeta Ratnakara

Question Type : MCQ

Question ID : 44100929008

Option 1 ID : 441009115513

Option 2 ID : 441009115512

Option 3 ID : 441009115511

Option 4 ID : 441009115510

Status : Answered

Chosen Option : 2

Q.43 The slogan "Do or Die" was given during which movement?

Ans 1. Non-Cooperation Movement

2. Khilafat Movement

3. Civil Disobedience Movement

4. Quit India Movement

Question Type : MCQ

Question ID : 4410091044947

Option 1 ID : 4410094128886

Option 2 ID : 4410094128889

Option 3 ID : 4410094128887

Option 4 ID : 4410094128888

Status : Answered

Chosen Option : 1

Q.44 Which of the following is the power of the Supreme Court to examine the constitutionality of legislative enactments and executive orders of the government.

- Ans**
- 1. Judicial Legislation
 - 2. Judicial Review
 - 3. Separation of Powers
 - 4. Special Leave Jurisdiction

Question Type :	MCQ
Question ID :	441009243666
Option 1 ID :	441009951981
Option 2 ID :	441009951982
Option 3 ID :	441009951983
Option 4 ID :	441009951984
Status :	Answered
Chosen Option :	2

Q.45 What is the tenure of the State Legislative Assembly (Vidhan Sabha)?

- Ans**
- 1. Permanent
 - 2. 6 years
 - 3. 4 years
 - 4. 5 years

Question Type :	MCQ
Question ID :	44100968774
Option 1 ID :	441009273730
Option 2 ID :	441009273729
Option 3 ID :	441009273727
Option 4 ID :	441009273728
Status :	Answered
Chosen Option :	4

Q.46 In which courts did Kathak develop into its two prominent traditions or gharanas?

- Ans**
- 1. Jaipur and Lucknow
 - 2. Delhi and Agra
 - 3. Varanasi and Allahabad
 - 4. Jalandhar and Amritsar

Question Type :	MCQ
Question ID :	44100973467
Option 1 ID :	441009292180
Option 2 ID :	441009292181
Option 3 ID :	441009292179
Option 4 ID :	441009292178
Status :	Answered
Chosen Option :	3

Q.47 At which place did the British army siege and defeat the rebels in September 1857?

Ans 1. Nagpur

2. Delhi

3. Lucknow

4. Meerut

Question Type : **MCQ**

Question ID : **441009246675**

Option 1 ID : **441009961001**

Option 2 ID : **441009961000**

Option 3 ID : **441009960999**

Option 4 ID : **441009960998**

Status : **Answered**

Chosen Option : **4**

Q.48 Which of the following reflects social infrastructure in the Indian context?

Ans 1. Export promotion councils and trade zones

2. Corporate marketing hubs in urban cities

3. Schools, hospitals, and health facilities

4. Luxury residential real estate complexes

Question Type : **MCQ**

Question ID : **4410091779448**

Option 1 ID : **4410097017197**

Option 2 ID : **4410097017198**

Option 3 ID : **4410097017196**

Option 4 ID : **4410097017199**

Status : **Answered**

Chosen Option : **1**

Q.49 Which of the following factors directly contributed to the outbreak of the Faqir and Sanyasi Rebellions in Bengal after 1757?

Ans 1. Introduction of railway networks to promote colonial trade in Bengal

2. Increase in land revenue demands by the East India Company in Bengal

3. Abolition of intermediary revenue collectors in northern princely states

4. Expansion of ryotwari settlements in the Madras Presidency region

Question Type : **MCQ**

Question ID : **4410091779290**

Option 1 ID : **4410097016556**

Option 2 ID : **4410097016557**

Option 3 ID : **4410097016559**

Option 4 ID : **4410097016558**

Status : **Answered**

Chosen Option : **2**

Q.50 Which of the following is a distinguishing feature of the Directive Principles of State Policy of India?

- Ans**
- 1. They are part of Fundamental Rights.
 - 2. They are justiciable and enforceable by the courts.
 - 3. They are non-justiciable and not enforceable by the courts.
 - 4. They cannot be amended by Parliament.

Question Type :	MCQ
Question ID :	44100929893
Option 1 ID :	441009119027
Option 2 ID :	441009119025
Option 3 ID :	441009119026
Option 4 ID :	441009119028
Status :	Not Answered
Chosen Option :	--

Q.51 Which of the following islands lie(s) in the Bay of Bengal?

- Ans**
- 1. Kavaratti island
 - 2. Lakshadweep islands
 - 3. Nicobar islands
 - 4. Pitti island

Question Type :	MCQ
Question ID :	44100914604
Option 1 ID :	44100958265
Option 2 ID :	44100958266
Option 3 ID :	44100958268
Option 4 ID :	44100958267
Status :	Answered
Chosen Option :	3

Q.52 Which article provides for the appellate jurisdiction of the Supreme Court in constitutional cases?

Ans 1. Article 131

2. Article 133

3. Article 130

4. Article 132

Question Type : **MCQ**

Question ID : **441009645797**

Option 1 ID : **4410092537284**

Option 2 ID : **4410092537286**

Option 3 ID : **4410092537283**

Option 4 ID : **4410092537285**

Status : **Answered**

Chosen Option : **4**

Q.53 Which birds are frequently depicted in Kalamkari paintings ?

Ans 1. Peacocks

2. Penguins

3. Swans

4. Eagles

Question Type : **MCQ**

Question ID : **44100977346**

Option 1 ID : **441009307373**

Option 2 ID : **441009307374**

Option 3 ID : **441009307372**

Option 4 ID : **441009307375**

Status : **Answered**

Chosen Option : **2**

Q.54	In which year did the Ministry of Environment, Forest and Climate Change (MoEFCC) launch the National Clean Air Programme (NCAP) to tackle air pollution?
Ans	<input type="checkbox"/> 1. 2021
	<input type="checkbox"/> 2. 2020
	<input type="checkbox"/> 3. 2018
	<input checked="" type="checkbox"/> 4. 2019

Question Type :	MCQ
Question ID :	441009334351
Option 1 ID :	4410091303353
Option 2 ID :	4410091303352
Option 3 ID :	4410091303350
Option 4 ID :	4410091303351
Status :	Not Answered
Chosen Option :	--

Q.55	Which of the following institutional mechanisms forms a central part of India's agricultural and village credit delivery system?
Ans	<input type="checkbox"/> 1. Foreign investment entities in strategic defence industries
	<input checked="" type="checkbox"/> 2. Rural Credit Cooperatives and Regional Rural Banks
	<input type="checkbox"/> 3. Private equity investment funds operating in global markets
	<input type="checkbox"/> 4. Corporate investment institutions and development finance agencies

Question Type :	MCQ
Question ID :	4410091779530
Option 1 ID :	4410097017539
Option 2 ID :	4410097017538
Option 3 ID :	4410097017536
Option 4 ID :	4410097017537
Status :	Answered
Chosen Option :	2

Q.56 In July 2025, which of the following cities of Odisha secured the 9th position in India in the Swachh Survekshan 2024–25 rankings?

Ans 1. Cuttack

2. Rourkela

3. Berhampur

4. Bhubaneswar

Question Type : **MCQ**

Question ID : **4410091526217**

Option 1 ID : **4410096027991**

Option 2 ID : **4410096027993**

Option 3 ID : **4410096027992**

Option 4 ID : **4410096027990**

Status : **Answered**

Chosen Option : **3**

Q.57 Which city is known as the "Silicon Valley of India" due to its IT and software service industry?

Ans 1. Pune

2. Hyderabad

3. Noida

4. Bengaluru

Question Type : **MCQ**

Question ID : **441009241911**

Option 1 ID : **441009945358**

Option 2 ID : **441009945357**

Option 3 ID : **441009945360**

Option 4 ID : **441009945359**

Status : **Answered**

Chosen Option : **4**



Q.58 In July 2025, who among the following was honoured with the Sansad Ratna Awards, 2025, for parliamentary performance?

- Ans**
- 1. Mahua Moitra
 - 2. Supriya Sule
 - 3. Rajnath Singh
 - 4. Manish Sisodia

Question Type :	MCQ
Question ID :	4410091568362
Option 1 ID :	4410096194735
Option 2 ID :	4410096194732
Option 3 ID :	4410096194734
Option 4 ID :	4410096194733
Status :	Answered
Chosen Option :	1

Q.59 On 17 January 2025, Russia signed a 20-year strategic partnership treaty with which country?

- Ans**
- 1. Iraq
 - 2. Iran
 - 3. India
 - 4. China

Question Type :	MCQ
Question ID :	441009938516
Option 1 ID :	4410093707767
Option 2 ID :	4410093707766
Option 3 ID :	4410093707765
Option 4 ID :	4410093707764
Status :	Answered
Chosen Option :	3

Q.60 The Goods and Services Tax (GST) was introduced in India through which Constitutional Amendment Act?

- Ans**
- 1. 97th Amendment Act
 - 2. 100th Amendment Act
 - 3. 101st Amendment Act
 - 4. 99th Amendment Act

Question Type : **MCQ**

Question ID : **44100931717**

Option 1 ID : **441009126356**

Option 2 ID : **441009126358**

Option 3 ID : **441009126359**

Option 4 ID : **441009126357**

Status : **Answered**

Chosen Option : **3**

Q.61 Which Constitutional Amendment Act has introduced a new Part IXA in the Indian Constitution, which deals with Municipalities?

- Ans**
- 1. 61st Amendment Act
 - 2. 74th Amendment Act
 - 3. 42nd Amendment Act
 - 4. 52nd Amendment Act

Question Type : **MCQ**

Question ID : **4410091576183**

Option 1 ID : **4410096225525**

Option 2 ID : **4410096225523**

Option 3 ID : **4410096225522**

Option 4 ID : **4410096225524**

Status : **Answered**

Chosen Option : **2**

Q.62 Which of the following correctly explains the primary function of the Diwan-i-Arz under the Delhi Sultanate?

- Ans**
- 1. Supervision of land revenue assessment and agrarian settlements
 - 2. Regulation of royal household expenditure and court ceremonies
 - 3. Organisation and inspection of the military establishment
 - 4. Administration of justice through civil and criminal courts

Question Type :	MCQ
Question ID :	4410091779356
Option 1 ID :	4410097016821
Option 2 ID :	4410097016822
Option 3 ID :	4410097016820
Option 4 ID :	4410097016823
Status :	Not Answered
Chosen Option :	--

Q.63 According to the report of the Ministry of Ports, Shipping and Waterways on the major Indian ports, which port handled the highest cargo volume among India's major ports during FY26 (April–July)?

- Ans**
- 1. Deendayal Port
 - 2. Chennai Port
 - 3. Paradip Port
 - 4. Mumbai Port

Question Type :	MCQ
Question ID :	4410091778128
Option 1 ID :	4410097011733
Option 2 ID :	4410097011732
Option 3 ID :	4410097011730
Option 4 ID :	4410097011731
Status :	Answered
Chosen Option :	3

Q.64 Who was Known as Hazar Dinari ?

Ans 1. Malik Kafur

2. Feroz Tugluq

3. Iltutmish

4. Balban

Question Type : **MCQ**

Question ID : **441009172155**

Option 1 ID : **441009681191**

Option 2 ID : **441009681193**

Option 3 ID : **441009681194**

Option 4 ID : **441009681192**

Status : **Answered**

Chosen Option : **1**

Q.65 Which one of the following dynasties and the kings are correctly matched?

Ans 1. Pala Dynasty - Pulakesin I

2. Gupta Dynasty - Iltutmish

3. Chola Dynasty - Mahendravarman I

4. Tuluva Dynasty - Krishna Deva Raya

Question Type : **MCQ**

Question ID : **44100916041**

Option 1 ID : **44100964035**

Option 2 ID : **44100964036**

Option 3 ID : **44100964034**

Option 4 ID : **44100964033**

Status : **Answered**

Chosen Option : **4**

Q.66 With reference to India's geographical location in relation to its neighbours, which of the following statements is correct?

Ans 1. Afghanistan shares a maritime boundary with India in the Arabian Sea

2. Sri Lanka is connected to India by a continuous land boundary and mountains

3. Bangladesh lies to the east of India and shares boundaries with several Indian states.

4. Nepal lies to the south of India and shares a coastline with the Indian Ocean

Question Type : **MCQ**

Question ID : **4410091778513**

Option 1 ID : **4410097013424**

Option 2 ID : **4410097013423**

Option 3 ID : **4410097013421**

Option 4 ID : **4410097013422**

Status : **Answered**

Chosen Option : **3**

Q.67 Which of the following organisations is involved in developing the Vikram 3201 and Kalpana 3201 microprocessors?

- Ans
- 1. BARC
 - 2. DRDO
 - 3. C-DAC
 - 4. ISRO

Question Type : MCQ

Question ID : 4410091054114

Option 1 ID : 4410094165522

Option 2 ID : 4410094165521

Option 3 ID : 4410094165524

Option 4 ID : 4410094165523

Status : Answered

Chosen Option : 3

Q.68 Who among the following was awarded the Vigyan Ratna in the Rashtriya Vigyan Puraskar for 2025 in the field of Science and Technology?

- Ans
- 1. Prof. Jayant Vishnu Narlikar
 - 2. Dr. C.N.R. Rao
 - 3. Dr. Tessy Thomas
 - 4. Dr. A.P.J. Abdul Kalam

Question Type : MCQ

Question ID : 4410091775085

Option 1 ID : 4410096999787

Option 2 ID : 4410096999789

Option 3 ID : 4410096999790

Option 4 ID : 4410096999788

Status : Answered

Chosen Option : 1

Q.69 Which company received conditional approval to commence satellite-based internet services in India in May 2025?

Ans 1. Amazon Kuiper

2. OneWeb

3. Blue Origin

4. SpaceX's Starlink

Question Type : MCQ

Question ID : 441009328666

Option 1 ID : 4410091281091

Option 2 ID : 4410091281090

Option 3 ID : 4410091281093

Option 4 ID : 4410091281092

Status : Not Answered

Chosen Option : --

Q.70 Smt. Sulochana Chavan, a recipient of the Padma Shri award, is legendary for her contribution to which traditional folk music style?

Ans 1. Baul

2. Bihu

3. Lavani

4. Pandavani

Question Type : MCQ

Question ID : 441009607133

Option 1 ID : 4410092383649

Option 2 ID : 4410092383652

Option 3 ID : 4410092383650

Option 4 ID : 4410092383651

Status : Not Answered

Chosen Option : --

Q.71 Which of the following years was designated as the Year of Human Resource Development and Discipline in India?

Ans 1. 2025

2. 2024

3. 2023

4. 2022

Question Type : **MCQ**

Question ID : **441009247801**

Option 1 ID : **441009965206**

Option 2 ID : **441009965205**

Option 3 ID : **441009965204**

Option 4 ID : **441009965203**

Status : **Answered**

Chosen Option : **1**

Q.72 Consider the statements:
Statement I: The procedure to amend the Constitution is given in the Constitution itself.
Statement II: Parliament has the power to add, modify or delete Constitutional provisions.

Ans 1. Both statements are correct.

2. Statement I is correct, statement II is incorrect.

3. Both statements are incorrect.

4. Statement I is incorrect, statement II is correct.

Question Type : **MCQ**

Question ID : **441009243352**

Option 1 ID : **441009950939**

Option 2 ID : **441009950937**

Option 3 ID : **441009950940**

Option 4 ID : **441009950938**

Status : **Answered**

Chosen Option : **1**

Q.73 Which state has produced the highest Bajra during 2023-24?

- Ans**
- 1. Chhattisgarh
 - 2. Rajasthan
 - 3. Uttar Pradesh
 - 4. Madhya Pradesh

Question Type :	MCQ
Question ID :	441009248684
Option 1 ID :	441009968737
Option 2 ID :	441009968739
Option 3 ID :	441009968740
Option 4 ID :	441009968738
Status :	Not Answered
Chosen Option :	--

Q.74 Luanda is the capital of which African country?

- Ans**
- 1. Namibia
 - 2. Zambia
 - 3. Ghana
 - 4. Angola

Question Type :	MCQ
Question ID :	4410091775231
Option 1 ID :	4410097000370
Option 2 ID :	4410097000367
Option 3 ID :	4410097000369
Option 4 ID :	4410097000368
Status :	Not Answered
Chosen Option :	--

Q.75 The western coastal plains of India are mainly:

- Ans**
- 1. submerged coasts
 - 2. emergent coasts
 - 3. depositional plains
 - 4. deltaic plains

Question Type :	MCQ
Question ID :	4410091312354
Option 1 ID :	4410095181105
Option 2 ID :	4410095181104
Option 3 ID :	4410095181106
Option 4 ID :	4410095181107
Status :	Not Answered
Chosen Option :	--

Q.76 Which architectural style is primarily associated with the temples of southern India?

- Ans**
- 1. Nagara style
 - 2. Vesara style
 - 3. Dravida style
 - 4. Hemadpanti style

Question Type :	MCQ
Question ID :	44100992411
Option 1 ID :	441009367358
Option 2 ID :	441009367360
Option 3 ID :	441009367359
Option 4 ID :	441009367361
Status :	Answered
Chosen Option :	3

Q.77 Sri Lanka is separated from India by which of the following water bodies?

- Ans**
- 1. Bering Strait and Bay of Bengal
 - 2. Palk Strait and Gulf of Mannar
 - 3. Malacca Strait and Andaman Sea
 - 4. Hormuz Strait and Arabian Sea

Question Type :	MCQ
Question ID :	4410091778511
Option 1 ID :	4410097013416
Option 2 ID :	4410097013413
Option 3 ID :	4410097013414
Option 4 ID :	4410097013415
Status :	Answered
Chosen Option :	2

Q.78 When was the National Food for Work Programme (NFFWP) was launched in India to generate supplementary wage employment in the 150 most backward districts of the country?

Ans 1. 2010

2. 2004

3. 2009

4. 2008

Question Type : **MCQ**

Question ID : **441009868977**

Option 1 ID : **4410093428939**

Option 2 ID : **4410093428941**

Option 3 ID : **4410093428942**

Option 4 ID : **4410093428940**

Status : **Not Answered**

Chosen Option : --

Q.79 Which of the following agreements formally suspended the Civil Disobedience Movement in 1931?

Ans 1. Lucknow Pact

2. Gandhi-Irwin Pact

3. Delhi Pact

4. Poona Pact

Question Type : **MCQ**

Question ID : **4410091779354**

Option 1 ID : **4410097016813**

Option 2 ID : **4410097016812**

Option 3 ID : **4410097016814**

Option 4 ID : **4410097016815**

Status : **Answered**

Chosen Option : **2**

Q.80	In February 2026, the Government of India launched which policy initiative to strengthen national security through a coordinated, intelligence-based response to terrorism and radical activities?
Ans	<input checked="" type="checkbox"/> 1. Defence Manufacturing and Export Promotion Strategy <input checked="" type="checkbox"/> 2. Border Infrastructure and Civil-Military Cooperation Plan <input checked="" type="checkbox"/> 3. Indo-Pacific Maritime Strategic Partnership Framework <input checked="" type="checkbox"/> 4. National Policy for Counter-Terror Intelligence Coordination

Question Type :	MCQ
Question ID :	4410091774776
Option 1 ID :	4410096998615
Option 2 ID :	4410096998616
Option 3 ID :	4410096998614
Option 4 ID :	4410096998613
Status :	Not Answered
Chosen Option :	--

Section : English

Q.81	Choose the synonym of the highlighted word that best fits the blank. The historian described the treaty as fragile, warning that the _____ agreement might collapse at the slightest dispute.
Ans	<input checked="" type="checkbox"/> 1. robust <input checked="" type="checkbox"/> 2. binding <input checked="" type="checkbox"/> 3. lasting <input checked="" type="checkbox"/> 4. delicate

Question Type :	MCQ
Question ID :	4410091721477
Option 1 ID :	4410096789131
Option 2 ID :	4410096789133
Option 3 ID :	4410096789130
Option 4 ID :	4410096789132
Status :	Answered
Chosen Option :	4

Q.82	Choose the correct active form of the following passive sentence. The annual budget proposal is thoroughly reviewed by the finance team before it is presented to the board.
Ans	<input checked="" type="checkbox"/> 1. The finance team thoroughly reviewing the annual budget proposal before they present it to the board.
	<input checked="" type="checkbox"/> 2. The finance team thoroughly reviewed the annual budget proposal before they present it to the board.
	<input checked="" type="checkbox"/> 3. The finance team thoroughly review the annual budget proposal before they present it to the board.
	<input checked="" type="checkbox"/> 4. The finance team thoroughly reviews the annual budget proposal before they present it to the board.

Question Type :	MCQ
Question ID :	4410091721458
Option 1 ID :	4410096789056
Option 2 ID :	4410096789057
Option 3 ID :	4410096789055
Option 4 ID :	4410096789054
Status :	Answered
Chosen Option :	4

Q.83	Identify the error in the following sentence and choose the corrected version of it from the options given. The CEO will announces the new policy in tomorrow's meeting.
Ans	<input checked="" type="checkbox"/> 1. The CEO would announces the new policy in tomorrow's meeting.
	<input checked="" type="checkbox"/> 2. The CEO announce the new policy in tomorrow's meeting.
	<input checked="" type="checkbox"/> 3. The CEO will be announce the new policy in tomorrow's meeting.
	<input checked="" type="checkbox"/> 4. The CEO will announce the new policy in tomorrow's meeting.


Question Type :	MCQ
Question ID :	441009383320
Option 1 ID :	4410091498828
Option 2 ID :	4410091498830
Option 3 ID :	4410091498831
Option 4 ID :	4410091498829
Status :	Answered
Chosen Option :	1

Q.84	What is the one-word substitution for the following expression? A person who avoids human company, distrusts others, and has a general dislike for humankind.
Ans	<input checked="" type="checkbox"/> 1. extrovert <input checked="" type="checkbox"/> 2. misanthrope <input checked="" type="checkbox"/> 3. egoist <input checked="" type="checkbox"/> 4. philanthropist

Question Type :	MCQ
Question ID :	4410091601717
Option 1 ID :	4410096326470
Option 2 ID :	4410096326472
Option 3 ID :	4410096326473
Option 4 ID :	4410096326471
Status :	Answered
Chosen Option :	2

Q.85	Identify the part of the sentence that contains an error. "He was played cricket when it started to rain."
Ans	<input checked="" type="checkbox"/> 1. was played <input checked="" type="checkbox"/> 2. He <input checked="" type="checkbox"/> 3. when it started to rain <input checked="" type="checkbox"/> 4. cricket

Question Type :	MCQ
Question ID :	441009866114
Option 1 ID :	4410093417577
Option 2 ID :	4410093417576
Option 3 ID :	4410093417579
Option 4 ID :	4410093417578
Status :	Answered
Chosen Option :	1



Q.86 Select the proverb that can substitute the underlined segment in the given sentence.
The prime requisite of parenthood in today's scenario is to make their children understand that small savings make one rich together.

Ans 1. make hay while the sunshines

2. where there is a will there is a way

3. better late than never

4. many a drop make an ocean

Question Type :	MCQ
Question ID :	441009917782
Option 1 ID :	4410093625186
Option 2 ID :	4410093625185
Option 3 ID :	4410093625187
Option 4 ID :	4410093625188
Status :	Answered
Chosen Option :	4

Q.87 The given sentence has an error. Select the option that rectifies the sentence.
The new software is incredibly efficient; sometimes, it is very easy for new employees to learn.

Ans 1. The new software is incredibly efficient; however, it is very easy for new employees to learn.

2. The new software is incredibly efficient; always, it is very easy for new employees to learn.

3. The new software is incredibly efficient; moreover, it is very easy for new employees to learn.

4. The new software is incredibly efficient; rarely, it is very easy for new employees to learn.

Question Type :	MCQ
Question ID :	441009378696
Option 1 ID :	4410091480442
Option 2 ID :	4410091480443
Option 3 ID :	4410091480441
Option 4 ID :	4410091480444
Status :	Answered
Chosen Option :	3

Q.88 Select the correct spelling of the incorrectly spelt word in the given sentence.

The study found that the prevalence of polypharmacy was 33.7% with significant associations to multiple commorbidities, recent transition of care and recent hospitalisation.

Ans 1. comorbidities

2. transtion

3. prevalance

4. polypharmecy

Question Type : **MCQ**

Question ID : **44100921864**

Option 1 ID : **44100987181**

Option 2 ID : **44100987182**

Option 3 ID : **44100987179**

Option 4 ID : **44100987180**

Status : **Answered**

Chosen Option : **4**

Q.89 Select the most appropriate one-word substitute for the underlined words.

Even after many failures, she showed great determination and did not give up.

Ans 1. weakness

2. carelessness

3. laziness

4. tenacity

Question Type : **MCQ**

Question ID : **4410091721497**

Option 1 ID : **4410096789210**

Option 2 ID : **4410096789213**

Option 3 ID : **4410096789211**

Option 4 ID : **4410096789212**

Status : **Answered**

Chosen Option : **4**

Q.90 Choose the antonym of the highlighted word in the following sentence.
After hearing the sad news, he became morose.

- Ans**
- 1. solemn
 - 2. thoughtful
 - 3. joyful
 - 4. quiet

Question Type :	MCQ
Question ID :	4410091734620
Option 1 ID :	4410096840572
Option 2 ID :	4410096840574
Option 3 ID :	4410096840571
Option 4 ID :	4410096840573
Status :	Answered
Chosen Option :	3

Q.91 Select the correct indirect narration of the given sentence.
The Finance Minister said, "The new budget will focus on job creation."

- Ans**
- 1. The Finance Minister announced that the new budget would focus on job creation.
 - 2. The Finance Minister announced that the new budget focus on job creation.
 - 3. The Finance Minister announced that the new budget will be focused on job creation.
 - 4. The Finance Minister announced that the new budget focused on job creation.

Question Type :	MCQ
Question ID :	4410091388531
Option 1 ID :	4410095484562
Option 2 ID :	4410095484563
Option 3 ID :	4410095484564
Option 4 ID :	4410095484561
Status :	Answered
Chosen Option :	3

Q.92	Select the INCORRECTLY spelt word.
Ans	<input checked="" type="checkbox"/> 1. Dilettante <input checked="" type="checkbox"/> 2. Philanthropy <input checked="" type="checkbox"/> 3. Quinessential <input checked="" type="checkbox"/> 4. Camouflage

Question Type :	MCQ
Question ID :	44100910778
Option 1 ID :	44100942895
Option 2 ID :	44100942897
Option 3 ID :	44100942896
Option 4 ID :	44100942894
Status :	Marked For Review
Chosen Option :	4

Q.93	"You can't have your cake and eat it too." What does this proverb imply?
Ans	<input checked="" type="checkbox"/> 1. You can enjoy everything without consequences. <input checked="" type="checkbox"/> 2. You must choose between two mutually exclusive things. <input checked="" type="checkbox"/> 3. Eating cake is not allowed before dinner. <input checked="" type="checkbox"/> 4. You should always share what you have with others.

Question Type :	MCQ
Question ID :	441009889640
Option 1 ID :	4410093512507
Option 2 ID :	4410093512508
Option 3 ID :	4410093512509
Option 4 ID :	4410093512506
Status :	Answered
Chosen Option :	2

Q.94 Parts of a sentence are given below. The first part is in the correct order, while the other parts of the sentence are jumbled up. Arrange the parts in the correct order to form a meaningful and coherent sentence.

We placed/ on the corner(Q)/ the laptop(P)/ in the room(S)/ of the desk(R).

- Ans**
- 1. RSPQ
 - 2. QSPR
 - 3. PQRS
 - 4. PSQR

Question Type :	MCQ
Question ID :	4410091224538
Option 1 ID :	4410094831627
Option 2 ID :	4410094831629
Option 3 ID :	4410094831630
Option 4 ID :	4410094831628
Status :	Answered
Chosen Option :	3

Q.95 The given sentence contains an error. Select the option that rectifies the sentence. Ms. Preethi commented, "The team played well, unless the umpiring was poor, so they lost."

- Ans**
- 1. Ms. Preethi commented, "The team played well, so the umpiring was poor, yet they lost."
 - 2. Ms. Preethi commented, "The team played well, unless the umpiring was poor, for they lost."
 - 3. Ms. Preethi commented, "The team played well, because the umpiring was poor, so they lost."
 - 4. Ms. Preethi commented, "The team played well, but the umpiring was poor, so they lost."

Question Type :	MCQ
Question ID :	441009378701
Option 1 ID :	4410091480464
Option 2 ID :	4410091480462
Option 3 ID :	4410091480463
Option 4 ID :	4410091480461
Status :	Answered
Chosen Option :	3

Q.96 Select the INCORRECTLY spelt word.

- Ans
- 1. Famous
 - 2. Beautiful
 - 3. Occassion
 - 4. Library

Question Type :	MCQ
Question ID :	44100911231
Option 1 ID :	44100944758
Option 2 ID :	44100944755
Option 3 ID :	44100944756
Option 4 ID :	44100944757
Status :	Answered
Chosen Option :	3

Q.97 Identify the error in the given sentence and choose the option that corrects it.

He run every morning before school.

- Ans
- 1. He ranned every morning before school.
 - 2. He runned every morning before school.
 - 3. He has ranned every morning before school.
 - 4. He runs every morning before school.

Question Type :	MCQ
Question ID :	4410091419478
Option 1 ID :	4410095606833
Option 2 ID :	4410095606830
Option 3 ID :	4410095606832
Option 4 ID :	4410095606831
Status :	Answered
Chosen Option :	4

Q.98 Choose the correct meaning for the idiom given below in bold.
Consistency in studying the syllabus and a deep understanding of current affairs hold the key to clearing the UPSC exam.

- Ans**
- 1. to face a difficult situation bravely
 - 2. to remain positive in a difficult situation
 - 3. to do something quickly or take shortcuts
 - 4. to have the essential knowledge and to have control of something

Question Type :	MCQ
Question ID :	4410091283157
Option 1 ID :	4410095064305
Option 2 ID :	4410095064304
Option 3 ID :	4410095064303
Option 4 ID :	4410095064302
Status :	Answered
Chosen Option :	4

Q.99 Select the option that expresses the given sentence in reported speech.
"Are you coming to the party?" he asked me.

- Ans**
- 1. He asked me if I was coming to the party.
 - 2. He asked me if am I coming to the party.
 - 3. He asked me that I was coming to the party.
 - 4. He asked me whether I am coming to the party.

Question Type :	MCQ
Question ID :	4410091133003
Option 1 ID :	4410094467379
Option 2 ID :	4410094467382
Option 3 ID :	4410094467381
Option 4 ID :	4410094467380
Status :	Answered
Chosen Option :	1

Q.100 Choose the most appropriate form of future tense from the given options to complete the sentence.

I _____ a T.V. show tomorrow.

Ans 1. have watched

2. will watch

3. have watch

4. watch

Question Type : **MCQ**

Question ID : **4410091190037**

Option 1 ID : **4410094694297**

Option 2 ID : **4410094694296**

Option 3 ID : **4410094694298**

Option 4 ID : **4410094694295**

Status : **Answered**

Chosen Option : **2**

Q.101 Select the antonym of the highlighted word as used in the sentence below.
The author's depiction of the protagonist was remarkably "candid", refusing to mask any flaws.

Ans 1. deceitful

2. quiet

3. open

4. honest

Question Type : **MCQ**

Question ID : **4410091721486**

Option 1 ID : **4410096789168**

Option 2 ID : **4410096789167**

Option 3 ID : **4410096789169**

Option 4 ID : **4410096789166**

Status : **Not Answered**

Chosen Option : **--**

Q.102 Select the grammatically correct sentence from the following options.

- Ans**
- 1. She never seen snowfall before this trip.
 - 2. She had never seen snowfall before this trip.
 - 3. She had never see snowfall before this trip.
 - 4. She had never saw snowfall before this trip.

Question Type :	MCQ
Question ID :	4410091132914
Option 1 ID :	4410094467029
Option 2 ID :	4410094467028
Option 3 ID :	4410094467030
Option 4 ID :	4410094467027
Status :	Answered
Chosen Option :	2

Q.103 Select the correct passive voice version of the given sentence.

The court advised the culprit to pay a hefty amount as compensation for the heinous crime he committed.

- Ans**
- 1. The culprit had been advised by the court to pay a hefty amount as compensation for the heinous crime he committed.
 - 2. The culprit has been advised by the court to pay a heft amount as compensation for the heinous crime he committed.
 - 3. The culprit was advised by the court to be paid a hefty amount as compensation for the heinous crime he committed.
 - 4. The culprit was advised by the court to pay a hefty amount as compensation for the heinous crime he had committed.

Question Type :	MCQ
Question ID :	4410091210975
Option 1 ID :	4410094777396
Option 2 ID :	4410094777397
Option 3 ID :	4410094777395
Option 4 ID :	4410094777394
Status :	Answered
Chosen Option :	4

Q.104 Parts of a sentence are given below in jumbled order. Arrange the parts in the correct order to form a meaningful sentence.

- A. supplement their weaker areas with
- B. not only bring their own strengths, but also
- C. learning settings, individuals
- D. effective strategies learnt from others
- E. in collaborative

Ans 1. B - A - D - E - C

2. A - B - D - C - E

3. E - C - B - A - D

4. C - E - A - D - B

Question Type : **MCQ**

Question ID : **441009126791**

Option 1 ID : **441009503841**

Option 2 ID : **441009503842**

Option 3 ID : **441009503843**

Option 4 ID : **441009503840**

Status : **Answered**

Chosen Option : **3**

Q.105 Convert the following sentence from Indirect to Direct Speech.
The teacher asked the student if he had revised his lessons.

Ans 1. The teacher said, "Did you revised your lessons?"

2. The teacher asked, "Had you revise your lessons?"

3. The teacher asked, "Have you revised your lessons?"

4. The teacher asked, "Do you revise your lessons?"

Question Type : **MCQ**

Question ID : **4410091169830**

Option 1 ID : **4410094613716**

Option 2 ID : **4410094613719**

Option 3 ID : **4410094613718**

Option 4 ID : **4410094613717**

Status : **Answered**

Chosen Option : **3**

Q.106 Select the word that expresses the opposite meaning of the highlighted term and logically completes the sentence.
The teacher asked students to keep their answers short, but Ravi wrote a very _____ response with many unnecessary details.


- Ans**
- 1. brief
 - 2. clear
 - 3. long
 - 4. neat

Question Type :	MCQ
Question ID :	4410091721481
Option 1 ID :	4410096789146
Option 2 ID :	4410096789148
Option 3 ID :	4410096789147
Option 4 ID :	4410096789149
Status :	Answered
Chosen Option :	3

Q.107 Identify the part that has an error in the given sentence.
Danny is taller / than Sue / or shorter / than Porto.

- Ans**
- 1. than Sue
 - 2. than Porto.
 - 3. Danny is taller
 - 4. or shorter

Question Type :	MCQ
Question ID :	44100948146
Option 1 ID :	441009191722
Option 2 ID :	441009191724
Option 3 ID :	441009191721
Option 4 ID :	441009191723
Status :	Answered
Chosen Option :	4



Q.108	Choose the grammatically correct sentence.
Ans	<p><input type="checkbox"/> 1. Each worker has been instructed the emergency procedures during the initial training period.</p> <p><input type="checkbox"/> 2. The manager explained to the staff the procedures, but some confusion about the protocol remained.</p> <p><input type="checkbox"/> 3. All new employees is given the orientation booklet before starting work at the company.</p> <p><input checked="" type="checkbox"/> 4. The supervisor will give the trainees detailed instructions once the safety briefing has finished.</p>

Question Type :	MCQ
Question ID :	4410091721468
Option 1 ID :	4410096789097
Option 2 ID :	4410096789095
Option 3 ID :	4410096789094
Option 4 ID :	4410096789096
Status :	Answered
Chosen Option :	1

Q.109	<p>Select the most appropriate option to substitute the underlined segment in the given sentence.</p> <p>After months of unemployment, Shekhar had to swallow his pride and ask his parents for help.</p>
Ans	<p><input type="checkbox"/> 1. raise his spirits</p> <p><input checked="" type="checkbox"/> 2. humble himself</p> <p><input type="checkbox"/> 3. inflate his ego</p> <p><input type="checkbox"/> 4. wash his hands</p>

Question Type :	MCQ
Question ID :	441009900998
Option 1 ID :	4410093558064
Option 2 ID :	4410093558063
Option 3 ID :	4410093558062
Option 4 ID :	4410093558065
Status :	Answered
Chosen Option :	2

Q.110 Choose the best one-word substitution for the underlined segment.
 He was unwilling to forgive even the smallest mistake, which made him difficult to work with.

- Ans**
- 1. Cheerful
 - 2. Careful
 - 3. Merciless
 - 4. Forgiving

Question Type :	MCQ
Question ID :	4410091721495
Option 1 ID :	4410096789204
Option 2 ID :	4410096789205
Option 3 ID :	4410096789203
Option 4 ID :	4410096789202
Status :	Answered
Chosen Option :	2

Comprehension:

Read the passage carefully and answer the questions that follow.

The invention of the printing press by Johannes Gutenberg in the mid-15th century marked a turning point in human history. Before its creation, books were copied by hand, often taking months or even years to produce a single manuscript. As a result, knowledge remained confined to wealthy elites and religious institutions. Gutenberg's press revolutionized this system by enabling the mass production of books, drastically reducing costs and increasing availability. Ordinary people gained access to ideas, literature, and scientific works that were once out of reach. This democratization of knowledge fueled movements such as the Renaissance and the Reformation, which reshaped European society. The printing press not only changed how information spread but also empowered individuals to think critically and independently. It laid the foundation for modern education and continues to symbolize the power of accessible knowledge in shaping civilizations.

SubQuestion No : 111

Q.111 Who invented the printing press?

- Ans**
- 1. Galileo Galilei
 - 2. Martin Luther
 - 3. Johannes Gutenberg
 - 4. Isaac Newton

Question Type :	MCQ
Question ID :	4410091341642
Option 1 ID :	4410095298668
Option 2 ID :	4410095298666
Option 3 ID :	4410095298667
Option 4 ID :	4410095298669
Status :	Answered
Chosen Option :	3

Comprehension:

Read the passage carefully and answer the questions that follow.

The invention of the printing press by Johannes Gutenberg in the mid-15th century marked a turning point in human history. Before its creation, books were copied by hand, often taking months or even years to produce a single manuscript. As a result, knowledge remained confined to wealthy elites and religious institutions. Gutenberg's press revolutionized this system by enabling the mass production of books, drastically reducing costs and increasing availability. Ordinary people gained access to ideas, literature, and scientific works that were once out of reach. This democratization of knowledge fueled movements such as the Renaissance and the Reformation, which reshaped European society. The printing press not only changed how information spread but also empowered individuals to think critically and independently. It laid the foundation for modern education and continues to symbolize the power of accessible knowledge in shaping civilizations.

SubQuestion No : 112	
Q.112	What was one major problem with books before the printing press?
Ans	<input type="checkbox"/> 1. They were too large to carry
	<input type="checkbox"/> 2. They were banned by rulers
	<input checked="" type="checkbox"/> 3. They took a long time to copy by hand
	<input type="checkbox"/> 4. They were written in Latin only

Question Type :	MCQ
Question ID :	4410091341643
Option 1 ID :	4410095298671
Option 2 ID :	4410095298673
Option 3 ID :	4410095298672
Option 4 ID :	4410095298670
Status :	Answered
Chosen Option :	3



Comprehension:

Read the passage carefully and answer the questions that follow.

The invention of the printing press by Johannes Gutenberg in the mid-15th century marked a turning point in human history. Before its creation, books were copied by hand, often taking months or even years to produce a single manuscript. As a result, knowledge remained confined to wealthy elites and religious institutions. Gutenberg's press revolutionized this system by enabling the mass production of books, drastically reducing costs and increasing availability. Ordinary people gained access to ideas, literature, and scientific works that were once out of reach. This democratization of knowledge fueled movements such as the Renaissance and the Reformation, which reshaped European society. The printing press not only changed how information spread but also empowered individuals to think critically and independently. It laid the foundation for modern education and continues to symbolize the power of accessible knowledge in shaping civilizations.

SubQuestion No : 113	
Q.113	How did the printing press empower ordinary people?
Ans	<p>✔ 1. By providing cheaper access to books and knowledge</p> <p>✘ 2. By giving them jobs in monasteries</p> <p>✘ 3. By teaching them to read instantly</p> <p>✘ 4. By limiting religious influence</p>

Question Type :	MCQ
Question ID :	4410091341644
Option 1 ID :	4410095298675
Option 2 ID :	4410095298676
Option 3 ID :	4410095298674
Option 4 ID :	4410095298677
Status :	Answered
Chosen Option :	1

Comprehension:

Read the passage carefully and answer the questions that follow.

The invention of the printing press by Johannes Gutenberg in the mid-15th century marked a turning point in human history. Before its creation, books were copied by hand, often taking months or even years to produce a single manuscript. As a result, knowledge remained confined to wealthy elites and religious institutions. Gutenberg's press revolutionized this system by enabling the mass production of books, drastically reducing costs and increasing availability. Ordinary people gained access to ideas, literature, and scientific works that were once out of reach. This democratization of knowledge fueled movements such as the Renaissance and the Reformation, which reshaped European society. The printing press not only changed how information spread but also empowered individuals to think critically and independently. It laid the foundation for modern education and continues to symbolize the power of accessible knowledge in shaping civilizations.

SubQuestion No : 114	
Q.114	What is the central theme of the passage?
Ans	<input checked="" type="checkbox"/> 1. The difficulties of medieval book production
	<input checked="" type="checkbox"/> 2. The rise of scientific inventions
	<input checked="" type="checkbox"/> 3. The impact of technology on knowledge and society
	<input checked="" type="checkbox"/> 4. The role of religion in Europe

Question Type :	MCQ
Question ID :	4410091341645
Option 1 ID :	4410095298680
Option 2 ID :	4410095298681
Option 3 ID :	4410095298679
Option 4 ID :	4410095298678
Status :	Answered
Chosen Option :	3



Comprehension:

Read the passage carefully and answer the questions that follow.

The invention of the printing press by Johannes Gutenberg in the mid-15th century marked a turning point in human history. Before its creation, books were copied by hand, often taking months or even years to produce a single manuscript. As a result, knowledge remained confined to wealthy elites and religious institutions. Gutenberg's press revolutionized this system by enabling the mass production of books, drastically reducing costs and increasing availability. Ordinary people gained access to ideas, literature, and scientific works that were once out of reach. This democratization of knowledge fueled movements such as the Renaissance and the Reformation, which reshaped European society. The printing press not only changed how information spread but also empowered individuals to think critically and independently. It laid the foundation for modern education and continues to symbolize the power of accessible knowledge in shaping civilizations.

SubQuestion No : 115

Q.115 What is the most appropriate title for this passage?

- Ans**
- 1. "The Fall of Manuscripts"
 - 2. "The Renaissance and Reformation"
 - 3. "The Life of Gutenberg"
 - 4. "The Revolution of Knowledge"

Question Type :	MCQ
Question ID :	4410091341646
Option 1 ID :	4410095298684
Option 2 ID :	4410095298685
Option 3 ID :	4410095298682
Option 4 ID :	4410095298683
Status :	Answered
Chosen Option :	4

Comprehension:

In the following passage, some words have been deleted. Fill in the blanks with the help of the alternatives given. Select the most appropriate option for each number.

The Red Fort in Delhi is a famous historical landmark built by Emperor Shah Jahan using red sandstone, giving it a distinctive (1) _____. Once the (2) _____ residence of Mughal rulers, it houses structures like the Diwan-i-Aam and Diwan-i-Khas. The fort holds deep (3) _____ significance, is a/an (4) _____ heritage site, and reflects India's rich (5) _____ legacy.

- SubQuestion No : 116**
- Q.116** Select the most appropriate option to fill in blank (1).
- Ans**
- 1. height
 - 2. strength
 - 3. colour
 - 4. decoration

Question Type :	MCQ
Question ID :	4410091584238
Option 1 ID :	4410096258254
Option 2 ID :	4410096258253
Option 3 ID :	4410096258252
Option 4 ID :	4410096258251
Status :	Answered
Chosen Option :	3

Comprehension:

In the following passage, some words have been deleted. Fill in the blanks with the help of the alternatives given. Select the most appropriate option for each number.

The Red Fort in Delhi is a famous historical landmark built by Emperor Shah Jahan using red sandstone, giving it a distinctive (1) _____. Once the (2) _____ residence of Mughal rulers, it houses structures like the Diwan-i-Aam and Diwan-i-Khas. The fort holds deep (3) _____ significance, is a/an (4) _____ heritage site, and reflects India's rich (5) _____ legacy.

- SubQuestion No : 117**
- Q.117** Select the most appropriate option to fill in blank (2).
- Ans**
- 1. temporary
 - 2. ordinary
 - 3. public
 - 4. royal

Question Type :	MCQ
Question ID :	4410091584239
Option 1 ID :	4410096258255
Option 2 ID :	4410096258256
Option 3 ID :	4410096258258
Option 4 ID :	4410096258257
Status :	Answered
Chosen Option :	4

Comprehension:

In the following passage, some words have been deleted. Fill in the blanks with the help of the alternatives given. Select the most appropriate option for each number.

The Red Fort in Delhi is a famous historical landmark built by Emperor Shah Jahan using red sandstone, giving it a distinctive (1) _____. Once the (2) _____ residence of Mughal rulers, it houses structures like the Diwan-i-Aam and Diwan-i-Khas. The fort holds deep (3) _____ significance, is a/an (4) _____ heritage site, and reflects India's rich (5) _____ legacy.

SubQuestion No : 118	
Q.118	Select the most appropriate option to fill in blank (3).
Ans	<input checked="" type="checkbox"/> 1. natural
	<input checked="" type="checkbox"/> 2. scientific
	<input checked="" type="checkbox"/> 3. cultural
	<input checked="" type="checkbox"/> 4. financial

Question Type :	MCQ
Question ID :	4410091584240
Option 1 ID :	4410096258262
Option 2 ID :	4410096258261
Option 3 ID :	4410096258259
Option 4 ID :	4410096258260
Status :	Answered
Chosen Option :	3

Comprehension:

In the following passage, some words have been deleted. Fill in the blanks with the help of the alternatives given. Select the most appropriate option for each number.

The Red Fort in Delhi is a famous historical landmark built by Emperor Shah Jahan using red sandstone, giving it a distinctive (1) _____. Once the (2) _____ residence of Mughal rulers, it houses structures like the Diwan-i-Aam and Diwan-i-Khas. The fort holds deep (3) _____ significance, is a/an (4) _____ heritage site, and reflects India's rich (5) _____ legacy.

SubQuestion No : 119	
Q.119	Select the most appropriate option to fill in blank (4).
Ans	<input checked="" type="checkbox"/> 1. insignificant
	<input checked="" type="checkbox"/> 2. ancient
	<input checked="" type="checkbox"/> 3. sensitive
	<input checked="" type="checkbox"/> 4. remote

Question Type :	MCQ
Question ID :	4410091584241
Option 1 ID :	4410096258266
Option 2 ID :	4410096258264
Option 3 ID :	4410096258263
Option 4 ID :	4410096258265
Status :	Answered
Chosen Option :	2

Comprehension:

In the following passage, some words have been deleted. Fill in the blanks with the help of the alternatives given. Select the most appropriate option for each number.

The Red Fort in Delhi is a famous historical landmark built by Emperor Shah Jahan using red sandstone, giving it a distinctive (1) _____. Once the (2) _____ residence of Mughal rulers, it houses structures like the Diwan-i-Aam and Diwan-i-Khas. The fort holds deep (3) _____ significance, is a/an (4) _____ heritage site, and reflects India's rich (5) _____ legacy.

SubQuestion No : 120

Q.120 Select the most appropriate option to fill in blank (5).

- Ans**
1. rural
2. moral
3. geographical
4. historic

Question Type : **MCQ**Question ID : **4410091584242**Option 1 ID : **4410096258268**Option 2 ID : **4410096258270**Option 3 ID : **4410096258269**Option 4 ID : **4410096258267**Status : **Answered**Chosen Option : **4**

Section : Odia

Q.121 ଉପଯୁକ୍ତ ଅବ୍ୟୟ ବାଛି ଶୂନ୍ୟସ୍ଥାନ ପୂରଣ କରନ୍ତୁ:

ତା' ପାଖରେ _____ ଗୋପାଳ ଆଉ ନାହିଁ ଯେ ତୁଳନାକ ଖର୍ଚ୍ଚ କରିଦେବ ।

- Ans**
1. ଯେତେତୁ
2. ଯଦିଓ
3. ଠିକଠକ
4. ଏବଂ

Question Type : **MCQ**Question ID : **4410091675461**Option 1 ID : **4410096610960**Option 2 ID : **4410096610961**Option 3 ID : **4410096610963**Option 4 ID : **4410096610962**Status : **Answered**Chosen Option : **3**

Q.122 ଅବ୍ୟୟ ପଦ ବ୍ୟବହାର କରି ବାକ୍ୟଟିକୁ ସମ୍ପୂର୍ଣ୍ଣ କର ।

"ଦେଶ ସ୍ୱାଧୀନ ହୋଇଛି , ____ ଲୋକଙ୍କ ଦୁଃଖ ଦୂର ହୋଇନି ।"

- Ans
- 1. କିନ୍ତୁ
 - 2. କେବେ
 - 3. ପୁଣି
 - 4. ଏବଂ

Question Type :	MCQ
Question ID :	4410091483708
Option 1 ID :	4410095861712
Option 2 ID :	4410095861711
Option 3 ID :	4410095861709
Option 4 ID :	4410095861710
Status :	Answered
Chosen Option :	1

Q.123 ନିମ୍ନଲିଖିତ ବାକ୍ୟର ଠିକ୍ ଇଂରାଜୀ ଅନୁବାଦ ବାଛି-
"ସତ୍ୟ ଓ ଅହିଂସା ତାଙ୍କ ଜୀବନର ଆଦର୍ଶ ଥିଲା ।"

- Ans
- 1. Truth and non-violence are the ideals of his life.
 - 2. Truth and non-violence were the ideals of his life.
 - 3. Truth and non-violence are his ideals of life.
 - 4. Truth and non-violence were his ideals.

Question Type :	MCQ
Question ID :	4410091725619
Option 1 ID :	4410096805535
Option 2 ID :	4410096805537
Option 3 ID :	4410096805538
Option 4 ID :	4410096805536
Status :	Answered
Chosen Option :	2



Q.124 "ଆଖିରେ ଧୂଳି ଦେବା"ର ଅର୍ଥ କ'ଣ?

Ans 1. ଠକିବା 2. ଆଶ୍ଚର୍ଯ୍ୟ 3. ପୁଣ 4. ଭୟ

Question Type : MCQ

Question ID : 4410091488144

Option 1 ID : 4410095878720

Option 2 ID : 4410095878721

Option 3 ID : 4410095878723

Option 4 ID : 4410095878722

Status : Answered

Chosen Option : 1

Q.125 ପ୍ରଦତ୍ତ ବାକ୍ୟରେ ରେଖାକିତ ହୋଇଥିବା ଶବ୍ଦ ସ୍ଥାନରେ ଏକ ଉପଯୁକ୍ତ ବାକ୍ୟ ଖଣ୍ଡ ବ୍ୟବହାର କରନ୍ତୁ।

ଆମେ ପ୍ରତିଦିନ ସକାଳୁ ବ୍ୟାୟାମ ଲାଗି ଜିମ ଯିବି।

Ans 1. ବ୍ୟାୟାମ ଲାଗି ଜିମ ଯାଏ 2. ବ୍ୟାୟାମ ଲାଗି ଜିମ ଗଲା 3. ବ୍ୟାୟାମ ଲାଗି ଜିମ ଯାଉ 4. ପରିବର୍ତ୍ତନର ଆବଶ୍ୟକତା ନାହିଁ।

Question Type : MCQ

Question ID : 4410091235683

Option 1 ID : 4410094876421

Option 2 ID : 4410094876420

Option 3 ID : 4410094876422

Option 4 ID : 4410094876423

Status : Answered

Chosen Option : 3

Q.126 ନିମ୍ନଲିଖିତ ପ୍ରଶ୍ନରେ ଦିଆଯାଇଥିବା ଚାରୋଟି ବିକଳ୍ପ ମଧ୍ୟରୁ ସେହି ବିକଳ୍ପକୁ ବାଛନ୍ତୁ, ଯାହା ପ୍ରଦତ୍ତ ପ୍ରବାଦ ବା ଲୋକବାଣୀର ଅର୍ଥକୁ ସର୍ବୋତ୍ତମ ଭାବରେ ପ୍ରକାଶ କରେ।
ବକର ବେକ ବଢ଼ିଲେ ମାନର ବିପତ୍ତି

- Ans
- 1. ବକର ବେକ ବଢ଼ିବା
 - 2. ଶତ୍ରୁର ସୁବିଧା ବିପଦର କାରଣ
 - 3. ଶତ୍ରୁକୁ ସୁବିଧା ଦେବା
 - 4. ବକ ମାନ ମାରିବା

Question Type :	MCQ
Question ID :	4410091238014
Option 1 ID :	4410094885587
Option 2 ID :	4410094885584
Option 3 ID :	4410094885586
Option 4 ID :	4410094885585
Status :	Answered
Chosen Option :	2

Q.127 ନିମ୍ନଲିଖିତ ଶବ୍ଦଗୁଡ଼ିକର ସମାନାର୍ଥବୋଧକ ଶବ୍ଦ ଲେଖ।
ନୀତିମାନ ଲୋକ ସବୁବେଳେ "ନୀତି" ଅନୁସରଣ କରନ୍ତି।

- Ans
- 1. ଅଜ୍ଞାନ
 - 2. ଚତୁରତା
 - 3. ଅନୀତି
 - 4. ଧର୍ମ

Question Type :	MCQ
Question ID :	4410091485499
Option 1 ID :	4410095868460
Option 2 ID :	4410095868459
Option 3 ID :	4410095868457
Option 4 ID :	4410095868458
Status :	Answered
Chosen Option :	4

Q.128 "ଗୋସାଇଁ" ର ଚତୁର୍ଥ ଶବ୍ଦ କେଉଁଟି ଅଟେ?

Ans 1. ପୁରୋହିତ 2. ପୁରାଣ 3. ଚାକର 4. ଗୋସ୍ତାମୀ

Question Type : MCQ

Question ID : 4410091235915

Option 1 ID : 4410094877248

Option 2 ID : 4410094877246

Option 3 ID : 4410094877249

Option 4 ID : 4410094877247

Status : Answered

Chosen Option : 4

Q.129 ଅବ୍ୟୟ ପଦ ବ୍ୟବହାର କରି ବାକ୍ୟଟିକୁ ସମ୍ପୂର୍ଣ୍ଣ କର ।

"ସେ ବର୍ଷାରେ ____ ଆସିବ, ବଡ଼ ହଲରାଣ ହେବ ।"

Ans 1. କାଳେ 2. ଯେବେ 3. ଯଦି 4. ପ୍ରାୟ

Question Type : MCQ

Question ID : 4410091483726

Option 1 ID : 4410095861782

Option 2 ID : 4410095861783

Option 3 ID : 4410095861784

Option 4 ID : 4410095861781

Status : Answered

Chosen Option : 3

Q.130 ବାକ୍ୟର ଅଂଶଗୁଡ଼ିକୁ ସଠିକ କ୍ରମରେ ପୁନଃସଜ୍ଜିତ କରନ୍ତୁ ।

- ହିରାକୁଦ ତ୍ୟାମ
P. ଯାହାର ଲମ୍ବ ପ୍ରାୟ
Q. ମଧ୍ୟରୁ ଅନ୍ୟତମ,
R. ପୃଥିବୀର ଦୀର୍ଘତମ ମାଟି ବନ୍ଧ
S. 25.8 କିଲୋମିଟର ଅଟେ

- Ans 1. SPQR
 2. QRPS
 3. PQSR
 4. RQPS

Question Type :	MCQ
Question ID :	4410091238291
Option 1 ID :	4410094886690
Option 2 ID :	4410094886691
Option 3 ID :	4410094886692
Option 4 ID :	4410094886693
Status :	Answered
Chosen Option :	4

Q.131 ନିମ୍ନଲିଖିତ ଶବ୍ଦଗୁଡ଼ିକର ସମାନାର୍ଥବୋଧକ ଶବ୍ଦ ଲେଖ ।
"ଅଗ୍ନି" ଦେବତାଙ୍କୁ ବେଦରେ ପବିତ୍ର ମନାଯାଇଛି ।

- Ans 1. ପୃଥିବୀ
 2. ଜଳ
 3. ଆଗ
 4. ପବନ

Question Type :	MCQ
Question ID :	4410091485508
Option 1 ID :	4410095868504
Option 2 ID :	4410095868501
Option 3 ID :	4410095868503
Option 4 ID :	4410095868502
Status :	Answered
Chosen Option :	3

Q.132 ନିମ୍ନଲିଖିତ ଇଂରାଜୀ ବାକ୍ୟର ଠିକ୍ ଓଡ଼ିଆ ଅନୁବାଦ ବାଛି-
"We should not quarrel among one another in the name of religion".

- Ans
1. ଧର୍ମ ନାମରେ ଆମେ ନିଜ ଭିତରେ କଳହ କରିବା ଠିକ୍ ନୁହେଁ ।
2. ଧର୍ମ ନାମରେ ନିଜ ଭିତରେ କଳହ କରିବା ଉଚିତ୍ ନୁହେଁ ।
3. ଧର୍ମ ନାମରେ ଆମେ ନିଜ ନିଜ ଭିତରେ କଳହ କରିବା ଉଚିତ୍ ନୁହେଁ ।
4. ଧର୍ମ ନାମରେ ଆମେ କଳହ କରିବା ଉଚିତ୍ ନୁହେଁ ।

Question Type : MCQ

Question ID : 4410091726020

Option 1 ID : 4410096807124

Option 2 ID : 4410096807126

Option 3 ID : 4410096807127

Option 4 ID : 4410096807125

Status : Answered

Chosen Option : 1

Q.133 ତୁମେ କାମ ଆରମ୍ଭ କରିବାର ଛଅ ଘଣ୍ଟା ବିତିଗଲାଣି । ଉକ୍ତ ଓଡ଼ିଆ ବାକ୍ୟଟିର ଇଂରାଜୀ ଅନୁବାଦଟିକୁ ଚୟନ କର ।

- Ans
1. Six hours have pass since you began the work.
2. Six hours have passed since you began the work.
3. Six hour have passed since you began the work.
4. Six hours have passed since you begin the work.

Question Type : MCQ

Question ID : 4410091729074

Option 1 ID : 4410096818837

Option 2 ID : 4410096818839

Option 3 ID : 4410096818838

Option 4 ID : 4410096818836

Status : Answered

Chosen Option : 2

Q.134 ଡହମ ଶକର ଅର୍ଥ କ'ଣ ହେବ?

Ans ✓ 1. ଯେଉଁଗୁଡ଼ିକ ଅବିକୃତ ଭାବେ ସଂସ୍କୃତରୁ ଗୃହୀତ

✗ 2. ଯେଉଁ ଶବ୍ଦଗୁଡ଼ିକ ଆଧୁନିକ

✗ 3. ଯେଉଁଗୁଡ଼ିକ ଦେଶୀ ଭାଷାରୁ ଆସିଛି

✗ 4. ଯେଉଁ ଶବ୍ଦଗୁଡ଼ିକ ନୂତନ ସୃଷ୍ଟି

Question Type : MCQ

Question ID : 4410091235930

Option 1 ID : 4410094877303

Option 2 ID : 4410094877305

Option 3 ID : 4410094877302

Option 4 ID : 4410094877304

Status : Answered

Chosen Option : 1

Q.135 ଅବ୍ୟୟ ପଦ ବ୍ୟବହାର କରି ବାକ୍ୟଟିକୁ ସମ୍ପୂର୍ଣ୍ଣ କର ।

"ନୀରଦ ___ ଭଲ ଗୁଣୀ ପିଲାଟିଏ ଦୁର୍ଲଭ ।"

Ans ✗ 1. ଅନୁଗମନ

✓ 2. ପରି

✗ 3. ସୁଗମନ

✗ 4. ଯଥା

Question Type : MCQ

Question ID : 4410091483721

Option 1 ID : 4410095861764

Option 2 ID : 4410095861763

Option 3 ID : 4410095861761

Option 4 ID : 4410095861762

Status : Answered

Chosen Option : 2

Comprehension:

ନିମ୍ନୋକ୍ତ ଅନୁଛେଦକୁ ପଢ଼ି ସମସ୍ତ ପ୍ରଶ୍ନଗୁଡ଼ିକର ଉତ୍ତର ଚୟନ କର ।

ମନୁଷ୍ୟ ନିତାନ୍ତ ଭାବରେ ଗୋଷ୍ଠିକ ଜୀବ । ସେ ସ୍ୱତନ୍ତ୍ର ରହିବାକୁ ଚାହେଁ, କିନ୍ତୁ ଏକା ରହିବାକୁ ଚାହେଁନା । ଆମେ ଘରଟିଏ କରି ତାରିପାଖ ପାଖରେ ବାଡ଼ ବା ପାଚେରି ଘେରାଇ ଦେଉ; ଆମର ସ୍ୱକୀୟ ସ୍ୱାତନ୍ତ୍ର୍ୟର କର୍ତ୍ତୃପତାକା ଉଡ଼ା; କିନ୍ତୁ ଯେତେ ସ୍ୱାତନ୍ତ୍ର୍ୟ ଚାହେଁଲେ ମଧ୍ୟ କେହି ନିର୍ଜନ ମନୁଷ୍ୟରେ ବା ଶୁଣାନରେ ଘର କରେନା । କାରଣ ମନୁଷ୍ୟ ସ୍ୱାତନ୍ତ୍ର୍ୟ ଚାହେଁ, ତା ସଙ୍ଗେ ସଙ୍ଗେ ସାମୂହ୍ୟ ବି ଚାହେଁ । ସିନ୍ଧୁର ଅଗଣିତ ବିନ୍ଦୁ ସିନ୍ଧୁରେ ମିଶିଗଲାପରି ସେ ନିଜର ସଭା ଭୁଲି ଯିବାକୁ ଚାହେଁନା । ସେ ସିନ୍ଧୁତ୍ର ଚାହେଁ, ବିନ୍ଦୁତ୍ର ମଧ୍ୟ ଚାହେଁ । ସମାଜର ପ୍ରତ୍ୟେକ ବ୍ୟକ୍ତି ଅପର ବ୍ୟକ୍ତିକୁ ଅବିଶ୍ୱାସ ବା ହିଂସାର ଦୃଷ୍ଟିରେ ଦେଖିପାରେ; କିନ୍ତୁ ପ୍ରତ୍ୟେକ ସମସ୍ତ ଭାବରେ ସମାଜକୁ ଚାହେଁନ୍ତି । ଏକତ୍ରିତ ଜନତାର ଏକ ସ୍ୱକୀୟ ପ୍ରୟୋଜନ ଓ ସୌନ୍ଦର୍ଯ୍ୟ ଅଛି । ମେଳାରେ ଲୋକେ ଲୋକକୁହିଁ ଦେଖିବାକୁ ବୋହୁନ୍ତି । ବ୍ୟକ୍ତି ଓ ସମସ୍ତ ଗଛ ଓ ଡା'ର ତାଳପରି, ପରସ୍ପରର ଅଙ୍ଗାଙ୍ଗୀ । ସମାଜର ଏକକ କୁଟୁମ୍ବ, କୁଟୁମ୍ବର କେନ୍ଦ୍ର ନାରୀ । ଏବେବି ପୃଥ୍ୱୀପୃଷ୍ଠରେ ଅନେକ ଗ୍ରାମ ଅଛି, ଯେଉଁଠି ସାରା ଗ୍ରାମଟି ଗୋଟିଏ କୁଟୁମ୍ବ, ପୃଥିବୀ ପୃଷ୍ଠରେ ଅର୍ଥାତ୍ ଗୋଟିଏ ସୁଗୁରୁ ପ୍ରସାରିତ, ଲକ୍ଷ ଲକ୍ଷ ବର୍ଷଧରି ଏକ ଏକ ନରନାରୀ ଯୁକ୍ତ ସୁଗୁରୁ କୁଟୁମ୍ବର ସଂପ୍ରସାରଣ ହୋଇ କୋଟି କୋଟି ସଂଖ୍ୟାରେ ଜାତି ଗଢ଼ି ଉଠିଛି । ପୁରାଣରେ ଯେଥିପାଇଁ ଦିତି, ଅଦିତି ତୁଳ ଭଉଣୀଠାରୁ ଦୈତ୍ୟ ଓ ଦେବତାମାନଙ୍କର ଉତ୍ପତ୍ତି ହୋଇଅଛି । ଇଂରେଜ ଓ ଜର୍ମାନ, ଗତ ଦୁଇଟି ମହାଯୁଦ୍ଧରେ ପରସ୍ପର ନାଶ-ନେଉଳପରି ଗଲା କଟାକଟି କଲେହେଁ ସେମାନଙ୍କର ରକ୍ତ ଏକ । ବହୁ ସହସ୍ର ବର୍ଷ ପୂର୍ବେ ସେମାନଙ୍କର ଜନନୀ ବୋଧହୁଏ ଏକ ଥିଲା । ସ୍ୱାର୍ଥ ଓ ସ୍ୱାତନ୍ତ୍ର୍ୟ ଇଚ୍ଛା ଯୋଗୁ କୁଟୁମ୍ବ ଯେପରି ଫଡ଼ାଫଡ଼ା ହୁଏ, ସମାଜ ମଧ୍ୟ ସେହିପରି ରାଷ୍ଟ୍ରରେ ବିଭକ୍ତ ହୋଇ ଲଢ଼େଇ ପାଇଁ ଚିଆର ହୁଏ । ଖ୍ରୀଷ୍ଟୀୟ ପୁରାଣ ଅନୁସାରେ ସମଗ୍ର ମାନବ ଜାତି ଆଡ଼ାମ୍ ଓ ଇଭ୍ ଏହି ଆଦିମ ନରନାରୀ ସୁଗୁରୁ ଉତ୍ପନ୍ନ । ପୃଥିବୀର ଶତ ଶତ ଭିନ୍ନ ଭିନ୍ନ ଭାଷା, ଭିନ୍ନ ଭିନ୍ନ ଧର୍ମ, ଆଚାର, ବ୍ୟବହାର ପୁଣି ତମତାର ଭିନ୍ନ ଭିନ୍ନ ବର୍ଷ ଓ ଓ ମୁଖମଣ୍ଡଳର ଗଠନ ବୈଚିତ୍ର ଦେଖିଲେ ବିଶ୍ୱାସ କରିବାକୁ କଷ୍ଟ ହୁଏ ଯେ, ଆମେ ସମଗ୍ର ମାନବ ଜାତି ଏକ ବାପ ମା'ପୁଁ ଜାତ । ସେ ଯାହାହେଉ; ଇତିହାସ ଆଲୋଚନା କଲେ ଏତିକି ଅନୁତଃ ଜଣାପଡ଼ୁଛି ଯେ, ପୃଥିବୀରେ ଦିନେ ଏତେ ଧର୍ମ ନଥିଲା କି ଏତେ ଭାଷା ବି ନଥିଲା – ଯେଉଁ ଧର୍ମ ଓ ଭାଷା ହିଁ ଆଜି ମନୁଷ୍ୟ ମନୁଷ୍ୟ ଭିତରେ ସହସ୍ର ଅଲଂଘ୍ୟ ପାଚେରିର କାମ କରୁଛନ୍ତି । ଧର୍ମ ଓ ଭାଷାଗୁଡ଼ିକ ଗଣନୀୟ କାଳ ଭିତରେହିଁ ଜନ୍ମ ଓ ଅଭିବୃଦ୍ଧି ପାଇଛନ୍ତି । ତତୁର୍ଦ୍ଦଶ ଶତାବ୍ଦୀ ପର୍ଯ୍ୟନ୍ତ ଇଉରୋପର ବିଶ୍ୱବିଖ୍ୟାତ ଭାଷାଗୁଡ଼ିକର ସଭାହିଁ ନଥିଲା । ଆଧୁନିକ ଭାରତର ଭାଷା ଗୁଡ଼ିକର କଥାହିଁ ସେହିପରି । ବଙ୍ଗାଳୀ, ଓଡ଼ିଆ ଓ ବିହାରୀ ଛଅଶ ବର୍ଷ ତଳେ ଏକ ଭାଷାରେ କଥାଭାଷା ହେଉଥିଲେ । ଏବେ କିନ୍ତୁ ନିକ ନିକର ସ୍ୱତନ୍ତ୍ର ଭାଷାର ଦ୍ୱାହି ଦେଇ ସେମାନେ ପରସ୍ପରର ମୁଣ୍ଡ ଫଟେଇବାକୁ ସଦା ଜାଗ୍ରତ । ଧର୍ମର କଥାବି ସେହିପରି । ମାନବିକ ସଭ୍ୟତା ଅନୁତଃ ସାତ ହଜାର ବର୍ଷର; କିନ୍ତୁ ଖ୍ରୀଷ୍ଟଧର୍ମର ଜନ୍ମ ମାତ୍ର ୧୯ ଶହ ବର୍ଷ ତଳେ, ଇସ୍ଲାମ୍‌ର ବାର ଶହ ବର୍ଷ ତଳେ, କିନ୍ତୁ ଏ ଦୁଇଟିଯାକ ଧର୍ମ ମନେକରନ୍ତି ଯେ ଇଶ୍ୱର ତାଙ୍କୁ ହିଁ ପ୍ରକୃତ ସତ୍ୟ ଓ ଜ୍ଞାନ ଦେଇଛନ୍ତି ଏବଂ ସେଥିପାଇଁ ଏ ଦୁଇଟି ଧର୍ମ ଯୋଗୁଁ ପୃଥିବୀରେ ଯେତେ ରକ୍ତପାତ ରାଜା ରାଜାର ଲଢ଼େଇ ଯୋଗୁଁ ବୋଧହୁଏ ସେତେ ହୋଇନାହିଁ । ଧର୍ମ ଓ ଭାଷାକୁ ଚିରନ୍ତନ ଓ ଅପରିବର୍ତ୍ତିତ ବା ଅପରିବର୍ତ୍ତନୀୟ ଘଟଣା ବୋଲି ଧରି ସମାଜରେ କନ୍ଦକ ସୃଷ୍ଟି କରିବାକୁ ତେଣୁ ଅନେକ ବୁଦ୍ଧିମାନ ଓ ବିଚାରବନ୍ତ ଲୋକ ଏବେ ଆଉ ପସନ୍ଦ କରନ୍ତି ନାହିଁ ।

SubQuestion No : 136	
Q.136	ଉକ୍ତ ଅନୁଛେଦଟି କେଉଁ ଧରଣର ରଚନା ?
Ans	<input type="checkbox"/> 1. ଜୀବନୀମୂଳକ <input type="checkbox"/> 2. ଡକ୍ଟ୍ ମୂଳକ <input checked="" type="checkbox"/> 3. ଆଲୋଚନା ମୂଳକ <input type="checkbox"/> 4. ବ୍ୟାଖ୍ୟା ମୂଳକ

Question Type :	MCQ
Question ID :	4410091739102
Option 1 ID :	4410096858013
Option 2 ID :	4410096858011
Option 3 ID :	4410096858012
Option 4 ID :	4410096858014
Status :	Answered
Chosen Option :	1

Comprehension:

ନିମ୍ନୋକ୍ତ ଅନୁଛେଦକୁ ପଢ଼ି ସମସ୍ତ ପ୍ରଶ୍ନଗୁଡ଼ିକର ଉତ୍ତର ଚୟନ କର ।

ମନୁଷ୍ୟ ନିତାନ୍ତ ଭାବରେ ଗୋଷ୍ଠିକ ଜୀବ । ସେ ସ୍ୱତନ୍ତ୍ର ରହିବାକୁ ଚାହେଁ, କିନ୍ତୁ ଏକା ରହିବାକୁ ଚାହେଁନା । ଆମେ ଘରଟିଏ କରି ତାରିପାଖ ପାଖରେ ବାଡ଼ ବା ପାଚେରି ଘେରାଇ ଦେଉ; ଆମର ସ୍ୱକୀୟ ସ୍ୱାତନ୍ତ୍ର୍ୟର କର୍ତ୍ତାପତାକା ଉଡ଼ାଇ; କିନ୍ତୁ ଯେତେ ସ୍ୱାତନ୍ତ୍ର୍ୟ ଚାହେଁଲେ ମଧ୍ୟ କେହି ନିଜ ନିଜ ମନୁଷ୍ୟରେ ବା ଶୁଣାନରେ ଘର କରେନା । କାରଣ ମନୁଷ୍ୟ ସ୍ୱାତନ୍ତ୍ର୍ୟ ଚାହେଁ, ତା ସଙ୍ଗେ ସଙ୍ଗେ ସାମୂହ୍ୟ ବି ଚାହେଁ । ସିନ୍ଧୁର ଅଗଣିତ ବିନ୍ଦୁ ସିନ୍ଧୁରେ ମିଶିଗଲାପରି ସେ ନିଜର ସଭା ଭୁଲି ଯିବାକୁ ଚାହେଁନା । ସେ ସିନ୍ଧୁତ୍ର ଚାହେଁ, ବିନ୍ଦୁତ୍ର ମଧ୍ୟ ଚାହେଁ । ସମାଜର ପ୍ରତ୍ୟେକ ବ୍ୟକ୍ତି ଅପର ବ୍ୟକ୍ତିକୁ ଅବିଶ୍ୱାସ ବା ହିଂସାର ଦୃଷ୍ଟିରେ ଦେଖିପାରେ ; କିନ୍ତୁ ପ୍ରତ୍ୟେକ ସମସ୍ତ ଭାବରେ ସମାଜକୁ ଚାହେଁନ୍ତି । ଏକତ୍ରିତ ଜନତାର ଏକ ସ୍ୱକୀୟ ପ୍ରୟୋଜନ ଓ ସୌନ୍ଦର୍ଯ୍ୟ ଅଛି । ମେଳାରେ ଲୋକେ ଲୋକକୁହିଁ ଦେଖିବାକୁ ବୋହୁନ୍ତି । ବ୍ୟକ୍ତି ଓ ସମସ୍ତ ଗଛ ଓ ତା'ର ଡାଳପରି, ପରସ୍ପରର ଅଙ୍ଗାଙ୍ଗୀ । ସମାଜର ଏକକ କୁଟୁମ୍ବ, କୁଟୁମ୍ବର କେନ୍ଦ୍ର ନାରୀ । ଏବେବି ପୃଥକୀପୃଷ୍ଠରେ ଅନେକ ଗ୍ରାମ ଅଛି, ଯେଉଁଠି ସାରା ଗ୍ରାମଟି ଗୋଟିଏ କୁଟୁମ୍ବ, ପୃଥିବୀ ପୃଷ୍ଠରେ ଅର୍ଥାତ୍ ଗୋଟିଏ ସୁଗୁରୁ ପ୍ରସାରିତ, ଲକ୍ଷ ଲକ୍ଷ ବର୍ଷଧରି ଏକ ଏକ ନରନାରୀ ଯୁଦ୍ଧ ସୁଗୁରୁ କୁଟୁମ୍ବର ସଂପ୍ରସାରଣ ହୋଇ କୋଟି କୋଟି ସଂଖ୍ୟାରେ ଜାତି ଗଢ଼ି ଉଠିଛି । ପୁରାଣରେ ଯେଥିପାଇଁ ଦିତି, ଅଦିତି ତୁଳ ଭଉଣୀଠାରୁ ଦୈତ୍ୟ ଓ ଦେବତାମାନଙ୍କର ଉତ୍ପତ୍ତି ହୋଇଅଛି । ଇଂରେଜ ଓ ଜର୍ମାନ, ଗତ ଦୁଇଟି ମହାଯୁଦ୍ଧରେ ପରସ୍ପର ନାଶ-ନେଉଳପରି ଗଲା କଟାକଟି କଲେହେଁ ସେମାନଙ୍କର ରକ୍ତ ଏକ । ବହୁ ସହସ୍ର ବର୍ଷ ପୂର୍ବେ ସେମାନଙ୍କର ଜନନୀ ବୋଧହୁଏ ଏକ ଥିଲା । ସ୍ୱାର୍ଥ ଓ ସ୍ୱାତନ୍ତ୍ର୍ୟ ଇଚ୍ଛା ଯୋଗୁ କୁଟୁମ୍ବ ଯେପରି ଫଡ଼ାଫଡ଼ା ହୁଏ, ସମାଜ ମଧ୍ୟ ସେହିପରି ରାଷ୍ଟ୍ରରେ ବିଭକ୍ତ ହୋଇ ଲଢ଼େଇ ପାଇଁ ଡିଆର ହୁଏ । ଖ୍ରୀଷ୍ଟୀୟ ପୁରାଣ ଅନୁସାରେ ସମଗ୍ର ମାନବ ଜାତି ଆଡ଼ାମ୍ ଓ ଇଭ୍ ଏହି ଆଦିମ ନରନାରୀ ସୁଗୁରୁ ଉତ୍ପନ୍ନ । ପୃଥିବୀର ଶତ ଶତ ଭିନ୍ନ ଭିନ୍ନ ଭାଷା, ଭିନ୍ନ ଭିନ୍ନ ଧର୍ମ, ଆଚାର, ବ୍ୟବହାର ପୁଣି ତମତାର ଭିନ୍ନ ଭିନ୍ନ ବର୍ଷ ଓ ଓ ମୁଖମଣ୍ଡଳର ଗଠନ ବୈଚିତ୍ର ଦେଖିଲେ ବିଶ୍ୱାସ କରିବାକୁ କଷ୍ଟ ହୁଏ ଯେ, ଆମେ ସମଗ୍ର ମାନବ ଜାତି ଏକ ବାପ ମା'ଠୁଁ ଜାତ । ସେ ଯାହାହେଉ; ଇତିହାସ ଆଲୋଚନା କଲେ ଏତିକି ଅନୁତଃ ଜଣାପଡ଼ୁଛି ଯେ, ପୃଥିବୀରେ ଦିନେ ଏତେ ଧର୍ମ ନଥିଲା କି ଏତେ ଭାଷା ବି ନଥିଲା – ଯେଉଁ ଧର୍ମ ଓ ଭାଷା ହିଁ ଆଜି ମନୁଷ୍ୟ ମନୁଷ୍ୟ ଭିତରେ ସହସ୍ର ଅଲଂଘ୍ୟ ପାଚେରିର କାମ କରୁଛନ୍ତି । ଧର୍ମ ଓ ଭାଷାଗୁଡ଼ିକ ଗଣନୀୟ କାଳ ଭିତରେହିଁ ଜନ୍ମ ଓ ଅଭିବୃଦ୍ଧି ପାଇଛନ୍ତି । ତତ୍ତତ୍ତ ଶତାବ୍ଦୀ ପର୍ଯ୍ୟନ୍ତ ଇଉରୋପର ବିଶ୍ୱବିଖ୍ୟାତ ଭାଷାଗୁଡ଼ିକର ସଭାହିଁ ନଥିଲା । ଆଧୁନିକ ଭାରତର ଭାଷା ଗୁଡ଼ିକର କଥାହିଁ ସେହିପରି । ବଙ୍ଗାଳୀ, ଓଡ଼ିଆ ଓ ବିହାରୀ ଛଅଶ ବର୍ଷ ତଳେ ଏକ ଭାଷାରେ କଥାଭାଷା ହେଉଥିଲେ । ଏବେ କିନ୍ତୁ ନିଜ ନିଜର ସ୍ୱତନ୍ତ୍ର ଭାଷାର ଦ୍ୱାହି ଦେଇ ସେମାନେ ପରସ୍ପରର ମୁଣ୍ଡ ଫଟେଇବାକୁ ସଦା ଜାଗ୍ରତ । ଧର୍ମର କଥାବି ସେହିପରି । ମାନବିକ ସଭ୍ୟତା ଅନୁତଃ ସାତ ହଜାର ବର୍ଷର; କିନ୍ତୁ ଖ୍ରୀଷ୍ଟଧର୍ମର ଜନ୍ମ ମାତ୍ର ୧୯ ଶହ ବର୍ଷ ତଳେ, ଇସ୍ଲାମ୍‌ର ବାର ଶହ ବର୍ଷ ତଳେ, କିନ୍ତୁ ଏ ଦୁଇଟି ଧର୍ମ ଯୋଗୁଁ ପୃଥିବୀରେ ଯେତେ ରକ୍ତପାତ ରାଜା ରାଜାର ଲଢ଼େଇ ଯୋଗୁଁ ବୋଧହୁଏ ସେତେ ହୋଇନାହିଁ । ଧର୍ମ ଓ ଭାଷାକୁ ଚିରନ୍ତନ ଓ ଅପରିବର୍ତ୍ତିତ ବା ଅପରିବର୍ତ୍ତନୀୟ ଘଟଣା ବୋଲି ଧରି ସମାଜରେ କନ୍ଦଳ ସୃଷ୍ଟି କରିବାକୁ ତେଣୁ ଅନେକ ବୁଦ୍ଧିମାନ ଓ ବିଚାରବନ୍ତ ଲୋକ ଏବେ ଆଉ ପସନ୍ଦ କରନ୍ତି ନାହିଁ ।

SubQuestion No : 137	
Q.137	ଅନୁଛେଦର ମୁଖ୍ୟ ଭାବ କଣ ?
Ans	<p><input checked="" type="checkbox"/> 1. ପ୍ରାକୃତିକ ସୌନ୍ଦର୍ଯ୍ୟର ବର୍ଣ୍ଣନା</p> <p><input checked="" type="checkbox"/> 2. ସମାଜରେ ଧର୍ମ, ଆଚାର ଓ ମୂଲ୍ୟବୋଧ</p> <p><input checked="" type="checkbox"/> 3. ଐତିହାସିକ ଘଟଣାର ବିବରଣୀ</p> <p><input checked="" type="checkbox"/> 4. ଆର୍ଥିକ ବିକାଶର ଆଲୋଚନା</p>

Question Type :	MCQ
Question ID :	4410091739103
Option 1 ID :	4410096858015
Option 2 ID :	4410096858017
Option 3 ID :	4410096858018
Option 4 ID :	4410096858016
Status :	Answered
Chosen Option :	2

Comprehension:

ନିମ୍ନୋକ୍ତ ଅନୁଛେଦକୁ ପଢ଼ି ସମସ୍ତ ପ୍ରଶ୍ନଗୁଡ଼ିକର ଉତ୍ତର ଚୟନ କର ।

ମନୁଷ୍ୟ ନିତାନ୍ତ ଭାବରେ ଗୋଷ୍ଠିକ ଜୀବ । ସେ ସ୍ୱତନ୍ତ୍ର ରହିବାକୁ ଚାହେଁ, କିନ୍ତୁ ଏକା ରହିବାକୁ ଚାହେଁନା । ଆମେ ଘରଟିଏ କରି ତାରିପାଖ ପାଖରେ ବାଡ଼ ବା ପାଚେରି ଘେରାଇ ଦେଉ; ଆମର ସ୍ୱକୀୟ ସ୍ୱାତନ୍ତ୍ର୍ୟର କର୍ତ୍ତାପତାକା ଉଡ଼ାକା; କିନ୍ତୁ ଯେତେ ସ୍ୱାତନ୍ତ୍ର୍ୟ ଚାହେଁଲେ ମଧ୍ୟ କେହି ନିର୍ଜନ ମନୁଷ୍ୟରେ ବା ଶୁଣାମରେ ଘର କରେନା । କାରଣ ମନୁଷ୍ୟ ସ୍ୱାତନ୍ତ୍ର୍ୟ ଚାହେଁ, ତା ସଙ୍ଗେ ସଙ୍ଗେ ସାମୂହ୍ୟ ବି ଚାହେଁ । ସିନ୍ଧୁର ଅଗଣିତ ବିନ୍ଦୁ ସିନ୍ଧୁରେ ମିଶିଗଲାପରି ସେ ନିଜର ସଭା ଭୁଲି ଯିବାକୁ ଚାହେଁନା । ସେ ସିନ୍ଧୁତ୍ର ଚାହେଁ, ବିନ୍ଦୁତ୍ର ମଧ୍ୟ ଚାହେଁ । ସମାଜର ପ୍ରତ୍ୟେକ ବ୍ୟକ୍ତି ଅପର ବ୍ୟକ୍ତିକୁ ଅବିଶ୍ୱାସ ବା ହିଂସାର ଦୃଷ୍ଟିରେ ଦେଖିପାରେ; କିନ୍ତୁ ପ୍ରତ୍ୟେକ ସମସ୍ତ ଭାବରେ ସମାଜକୁ ଚାହେଁନ୍ତି । ଏକତ୍ରିତ ଜନତାର ଏକ ସ୍ୱକୀୟ ପ୍ରୟୋଜନ ଓ ସୌନ୍ଦର୍ଯ୍ୟ ଅଛି । ମେଳାରେ ଲୋକେ ଲୋକକୁହିଁ ଦେଖିବାକୁ ବୋହୁନ୍ତି । ବ୍ୟକ୍ତି ଓ ସମସ୍ତ ଗଛ ଓ ଡା'ର ଡାଳପରି, ପରସ୍ପରର ଅଙ୍ଗାଙ୍ଗୀ । ସମାଜର ଏକକ କୁଟୁମ୍ବ, କୁଟୁମ୍ବର କେନ୍ଦ୍ର ନାହିଁ । ଏବେବି ପୃଥକୀପୃଷ୍ଠରେ ଅନେକ ଗ୍ରାମ ଅଛି, ଯେଉଁଠି ସାରା ଗ୍ରାମଟି ଗୋଟିଏ କୁଟୁମ୍ବ, ପୃଥିବୀ ପୃଷ୍ଠରେ ଅର୍ଥାତ୍ ଗୋଟିଏ ସୁଗୁରୁ ପ୍ରସାରିତ, ଲକ୍ଷ ଲକ୍ଷ ବର୍ଷଧରି ଏକ ଏକ ନରନାରୀ ଯୁକ୍ତ ସୁଗୁରୁ କୁଟୁମ୍ବର ସଂପ୍ରସାରଣ ହୋଇ କୋଟି କୋଟି ସଂଖ୍ୟାରେ ଜାତି ଗଢ଼ି ଉଠିଛି । ପୁରାଣରେ ଯେଥିପାଇଁ ଦିତି, ଅଦିତି ତୁଳ ଭଉଣୀଠାରୁ ଦୈତ୍ୟ ଓ ଦେବତାମାନଙ୍କର ଉତ୍ପତ୍ତି ବର୍ଣ୍ଣିତ ହୋଇଅଛି । ଇଂରେଜ ଓ ଜର୍ମାନ, ଗତ ଦୁଇଟି ମହାଯୁଦ୍ଧରେ ପରସ୍ପର ନାଶ-ନେଉଳପରି ଗଳା କଟାକଟି କଲେହେଁ ସେମାନଙ୍କର ରକ୍ତ ଏକ । ବହୁ ସହସ୍ର ବର୍ଷ ପୂର୍ବେ ସେମାନଙ୍କର ଜନନୀ ବୋଧହୁଏ ଏକ ଥିଲା । ସ୍ୱାର୍ଥ ଓ ସ୍ୱାତନ୍ତ୍ର୍ୟ ଇଚ୍ଛା ଯୋଗୁ କୁଟୁମ୍ବ ଯେପରି ଫଡ଼ାଫଡ଼ା ହୁଏ, ସମାଜ ମଧ୍ୟ ସେହିପରି ରାଷ୍ଟ୍ରରେ ବିଭକ୍ତ ହୋଇ ଲଢ଼େଇ ପାଇଁ ଡିଆର ହୁଏ । ଖ୍ରୀଷ୍ଟୀୟ ପୁରାଣ ଅନୁସାରେ ସମଗ୍ର ମାନବ ଜାତି ଆଡ଼ାମ୍ ଓ ଇଭ୍ ଏହି ଆଦିମ ନରନାରୀ ସୁଗୁରୁ ଉତ୍ପନ୍ନ । ପୃଥିବୀର ଶତ ଶତ ଭିନ୍ନ ଭିନ୍ନ ଭାଷା, ଭିନ୍ନ ଭିନ୍ନ ଧର୍ମ, ଆଚାର, ବ୍ୟବହାର ପୁଣି ତମତାର ଭିନ୍ନ ଭିନ୍ନ ବର୍ଷ ଓ ଓ ମୁଖମଣ୍ଡଳର ଗଠନ ବୈଚିତ୍ର୍ୟ ଦେଖିଲେ ବିଶ୍ୱାସ କରିବାକୁ କଷ୍ଟ ହୁଏ ଯେ, ଆମେ ସମଗ୍ର ମାନବ ଜାତି ଏକ ବାପ ମା'ପୁଁ ଜାତ । ସେ ଯାହାହେଉ; ଇତିହାସ ଆଲୋଚନା କଲେ ଏତିକି ଅନୁତଃ ଜଣାପଡ଼ୁଛି ଯେ, ପୃଥିବୀରେ ଦିନେ ଏତେ ଧର୍ମ ନଥିଲା କି ଏତେ ଭାଷା ବି ନଥିଲା – ଯେଉଁ ଧର୍ମ ଓ ଭାଷା ହିଁ ଆଜି ମନୁଷ୍ୟ ମନୁଷ୍ୟ ଭିତରେ ସହସ୍ର ଅଲଂଘ୍ୟ ପାଚେରିର କାମ କରୁଛନ୍ତି । ଧର୍ମ ଓ ଭାଷାଗୁଡ଼ିକ ଗଣନୀୟ କାଳ ଭିତରେହିଁ ଜନ୍ମ ଓ ଅଭିବୃଦ୍ଧି ପାଇଛନ୍ତି । ତତୁର୍ଦ୍ଦଶ ଶତାବ୍ଦୀ ପର୍ଯ୍ୟନ୍ତ ଇଉରୋପର ବିଶ୍ୱବିଖ୍ୟାତ ଭାଷାଗୁଡ଼ିକର ସଭାହିଁ ନଥିଲା । ଆଧୁନିକ ଭାରତର ଭାଷା ଗୁଡ଼ିକର କଥାହିଁ ସେହିପରି । ବଙ୍ଗାଳୀ, ଓଡ଼ିଆ ଓ ବିହାରୀ ଛଅଶ ବର୍ଷ ତଳେ ଏକ ଭାଷାରେ କଥାଭାଷା ହେଉଥିଲେ । ଏବେ କିନ୍ତୁ ନିକ ନିକର ସ୍ୱତନ୍ତ୍ର ଭାଷାର ଦ୍ୱାହି ଦେଇ ସେମାନେ ପରସ୍ପରର ମୁଣ୍ଡ ଫଟେଇବାକୁ ସଦା ଜାଗ୍ରତ । ଧର୍ମର କଥାବି ସେହିପରି । ମାନବିକ ସଭ୍ୟତା ଅନୁତଃ ସାତ ହଜାର ବର୍ଷର; କିନ୍ତୁ ଖ୍ରୀଷ୍ଟଧର୍ମର ଜନ୍ମ ମାତ୍ର ୧୯ ଶହ ବର୍ଷ ତଳେ, ଇସଲାମ୍‌ର ବାର ଶହ ବର୍ଷ ତଳେ, କିନ୍ତୁ ଏ ଦୁଇଟିଯାକ ଧର୍ମ ମନେକରନ୍ତି ଯେ ଈଶ୍ୱର ତାଙ୍କୁ ହିଁ ପ୍ରକୃତ ସତ୍ୟ ଓ ଜ୍ଞାନ ଦେଇଛନ୍ତି ଏବଂ ସେଥିପାଇଁ ଏ ଦୁଇଟି ଧର୍ମ ଯୋଗୁଁ ପୃଥିବୀରେ ଯେତେ ରକ୍ତପାତ ରାଜା ରାଜାର ଲଢ଼େଇ ଯୋଗୁଁ ବୋଧହୁଏ ସେତେ ହୋଇନାହିଁ । ଧର୍ମ ଓ ଭାଷାକୁ ଚିରନ୍ତନ ଓ ଅପରିବର୍ତ୍ତିତ ବା ଅପରିବର୍ତ୍ତନୀୟ ଘଟଣା ବୋଲି ଧରି ସମାଜରେ କନ୍ଦକ ସୃଷ୍ଟି କରିବାକୁ ତେଣୁ ଅନେକ ବୁଦ୍ଧିମାନ ଓ ବିଚାରବନ୍ତ ଲୋକ ଏବେ ଆଉ ପସନ୍ଦ କରନ୍ତି ନାହିଁ ।

SubQuestion No : 138	
Q.138	ଅନୁଛେଦର ସଠିକ୍ ଶୀର୍ଷକ କେଉଁଟି ?
Ans	<input checked="" type="checkbox"/> 1. ବୈଜ୍ଞାନିକ ଉତ୍ପତ୍ତି <input checked="" type="checkbox"/> 2. ପ୍ରାକୃତିକ ସମ୍ପଦ <input checked="" type="checkbox"/> 3. ସମାଜ ଓ ମାନବ ମୂଲ୍ୟ <input checked="" type="checkbox"/> 4. ଐତିହାସିକ ଭାରତ

Question Type :	MCQ
Question ID :	4410091739104
Option 1 ID :	4410096858022
Option 2 ID :	4410096858019
Option 3 ID :	4410096858020
Option 4 ID :	4410096858021
Status :	Answered
Chosen Option :	3

Comprehension:

ନିମ୍ନୋକ୍ତ ଅନୁଛେଦକୁ ପଢ଼ି ସମସ୍ତ ପ୍ରଶ୍ନଗୁଡ଼ିକର ଉତ୍ତର ଚୟନ କର ।
 ମନୁଷ୍ୟ ନିତାନ୍ତ ଭାବରେ ଗୋଷ୍ଠିକ ଜୀବ । ସେ ସ୍ୱତନ୍ତ୍ର ରହିବାକୁ ଚାହେଁ, କିନ୍ତୁ ଏକା ରହିବାକୁ ଚାହେଁନା । ଆମେ ଘରଟିଏ କରି ଚାରିପାଖ ପାଖରେ ବାଡ଼ ବା ପାଚେରି ଘେରାଇ ଦେଉ; ଆମର ସ୍ୱକୀୟ ସ୍ୱାତନ୍ତ୍ର୍ୟର କର୍ତ୍ତାପତାକା ଉଡ଼ାଇ; କିନ୍ତୁ ଯେତେ ସ୍ୱାତନ୍ତ୍ର୍ୟ ଚାହେଁଲେ ମଧ୍ୟ କେହି ନିର୍ଜନ ମନୁଷ୍ୟରେ ବା ଶୁଣାନରେ ଘର କରେନା । କାରଣ ମନୁଷ୍ୟ ସ୍ୱାତନ୍ତ୍ର୍ୟ ଚାହେଁ, ତା ସଙ୍ଗେ ସଙ୍ଗେ ସାମୂହ୍ୟ ବି ଚାହେଁ । ସିନ୍ଧୁର ଅଗଣିତ ବିନ୍ଦୁ ସିନ୍ଧୁରେ ମିଶିଗଲାପରି ସେ ନିଜର ସଭା ଭୁଲି ଯିବାକୁ ଚାହେଁନା । ସେ ସିନ୍ଧୁତ୍ର ଚାହେଁ, ବିନ୍ଦୁତ୍ର ମଧ୍ୟ ଚାହେଁ । ସମାଜର ପ୍ରତ୍ୟେକ ବ୍ୟକ୍ତି ଅପର ବ୍ୟକ୍ତିକୁ ଅବିଶ୍ୱାସ ବା ହିଂସାର ଦୃଷ୍ଟିରେ ଦେଖିପାରେ ; କିନ୍ତୁ ପ୍ରତ୍ୟେକ ସମସ୍ତ ଭାବରେ ସମାଜକୁ ଚାହେଁନ୍ତି । ଏକତ୍ର ଜନତାର ଏକ ସ୍ୱକୀୟ ପ୍ରୟୋଜନ ଓ ସୌନ୍ଦର୍ଯ୍ୟ ଅଛି । ମେଳାରେ ଲୋକେ ଲୋକକୁହିଁ ଦେଖିବାକୁ ବୋହୁନ୍ତି । ବ୍ୟକ୍ତି ଓ ସମସ୍ତ ଗଛ ଓ ଡା'ର ଡାଳପରି, ପରସ୍ପରର ଅଙ୍ଗାଙ୍ଗୀ । ସମାଜର ଏକକ କୁଟୁମ୍ବ, କୁଟୁମ୍ବର କେନ୍ଦ୍ର ନାରୀ । ଏବେବି ପୃଥକୀପୃଷ୍ଠରେ ଅନେକ ଗ୍ରାମ ଅଛି, ଯେଉଁଠି ସାରା ଗ୍ରାମଟି ଗୋଟିଏ କୁଟୁମ୍ବ, ପୃଥିବୀ ପୃଷ୍ଠରେ ଅର୍ଥାତ୍ ଗୋଟିଏ ସୁଗୁରୁ ପ୍ରସାରିତ, ଲକ୍ଷ ଲକ୍ଷ ବର୍ଷଧରି ଏକ ଏକ ନରନାରୀ ଯୁଦ୍ଧ ସୁଗୁରୁ କୁଟୁମ୍ବର ସଂପ୍ରସାରଣ ହୋଇ କୋଟି କୋଟି ସଂଖ୍ୟାରେ ଜାତି ଗଢ଼ି ଉଠିଛି । ପୁରାଣରେ ଯେଥିପାଇଁ ଦିତି, ଅଦିତି ତୁଳ ଭଉଣୀଠାରୁ ଦୈତ୍ୟ ଓ ଦେବତାମାନଙ୍କର ଉତ୍ପତ୍ତି ହୋଇଅଛି । ଇଂରେଜ ଓ ଜର୍ମାନ, ଗତ ଦୁଇଟି ମହାଯୁଦ୍ଧରେ ପରସ୍ପର ନାଶ-ନେଉଳପରି ଗଳା କଟାକଟି କଲେହେଁ ସେମାନଙ୍କର ରକ୍ତ ଏକ । ବହୁ ସହସ୍ର ବର୍ଷ ପୂର୍ବେ ସେମାନଙ୍କର ଜନନୀ ବୋଧହୁଏ ଏକ ଥିଲା । ସ୍ୱାର୍ଥ ଓ ସ୍ୱାତନ୍ତ୍ର୍ୟ ଇଚ୍ଛା ଯୋଗୁ କୁଟୁମ୍ବ ଯେପରି ଫଡ଼ାଫଡ଼ା ହୁଏ, ସମାଜ ମଧ୍ୟ ସେହିପରି ରାଷ୍ଟ୍ରରେ ବିଭକ୍ତ ହୋଇ ଲଢ଼େଇ ପାଇଁ ଡିଆର ହୁଏ । ଖ୍ରୀଷ୍ଟୀୟ ପୁରାଣ ଅନୁସାରେ ସମଗ୍ର ମାନବ ଜାତି ଆଡ଼ାମ୍ ଓ ଇଭ୍ ଏହି ଆଦିମ ନରନାରୀ ସୁଗୁରୁ ଉତ୍ପନ୍ନ । ପୃଥିବୀର ଶତ ଶତ ଭିନ୍ନ ଭିନ୍ନ ଭାଷା, ଭିନ୍ନ ଭିନ୍ନ ଧର୍ମ, ଆଚାର, ବ୍ୟବହାର ପୁଣି ତମତାର ଭିନ୍ନ ଭିନ୍ନ ବର୍ଷ ଓ ଓ ମୁଖମଣ୍ଡଳର ଗଠନ ବୈଚିତ୍ର୍ୟ ଦେଖିଲେ ବିଶ୍ୱାସ କରିବାକୁ କଷ୍ଟ ହୁଏ ଯେ, ଆମେ ସମଗ୍ର ମାନବ ଜାତି ଏକ ବାପ ମା'ପୁଁ ଜାତ । ସେ ଯାହାହେଉ; ଇତିହାସ ଆଲୋଚନା କଲେ ଏତିକି ଅନୁତଃ ଜଣାପଡ଼ୁଛି ଯେ, ପୃଥିବୀରେ ଦିନେ ଏତେ ଧର୍ମ ନଥିଲା କି ଏତେ ଭାଷା ବି ନଥିଲା – ଯେଉଁ ଧର୍ମ ଓ ଭାଷା ହିଁ ଆଜି ମନୁଷ୍ୟ ମନୁଷ୍ୟ ଭିତରେ ସହସ୍ର ଅଲଂଘ୍ୟ ପାଚେରିର କାମ କରୁଛନ୍ତି । ଧର୍ମ ଓ ଭାଷାଗୁଡ଼ିକ ଗଣନୀୟ କାଳ ଭିତରେହିଁ ଜନ୍ମ ଓ ଅଭିବୃଦ୍ଧି ପାଇଛନ୍ତି । ତତ୍ତତ୍ତତ୍ତ ଶତାବ୍ଦୀ ପର୍ଯ୍ୟନ୍ତ ଇଉରୋପର ବିଶ୍ୱବିଖ୍ୟାତ ଭାଷାଗୁଡ଼ିକର ସଭାହିଁ ନଥିଲା । ଆଧୁନିକ ଭାରତର ଭାଷା ଗୁଡ଼ିକର କଥାହିଁ ସେହିପରି । ବଙ୍ଗାଳୀ, ଓଡ଼ିଆ ଓ ବିହାରୀ ଛଅଶ ବର୍ଷ ତଳେ ଏକ ଭାଷାରେ କଥାଭାଷା ହେଉଥିଲେ । ଏବେ କିନ୍ତୁ ନିଜ ନିଜର ସ୍ୱତନ୍ତ୍ର ଭାଷାର ଦ୍ୱାହି ଦେଇ ସେମାନେ ପରସ୍ପରର ମୁଣ୍ଡ ଫଟେଇବାକୁ ସଦା ଜାଗ୍ରତ । ଧର୍ମର କଥାବି ସେହିପରି । ମାନବିକ ସଭ୍ୟତା ଅନୁତଃ ସାତ ହଜାର ବର୍ଷର; କିନ୍ତୁ ଖ୍ରୀଷ୍ଟଧର୍ମର ଜନ୍ମ ମାତ୍ର ୧୯ ଶହ ବର୍ଷ ତଳେ, ଇସଲାମ୍‌ର ବାର ଶହ ବର୍ଷ ତଳେ, କିନ୍ତୁ ଏ ଦୁଇଟିଯାକ ଧର୍ମ ମନେକରନ୍ତୁ ଯେ ଇଶ୍ୱର ତାଙ୍କୁ ହିଁ ପ୍ରକୃତ ସତ୍ୟ ଓ ଜ୍ଞାନ ଦେଇଛନ୍ତି ଏବଂ ସେଥିପାଇଁ ଏ ଦୁଇଟି ଧର୍ମ ଯୋଗୁଁ ପୃଥିବୀରେ ଯେତେ ରକ୍ତପାତ ରାଜା ରାଜାର ଲଢ଼େଇ ଯୋଗୁଁ ବୋଧହୁଏ ସେତେ ହୋଇନାହିଁ । ଧର୍ମ ଓ ଭାଷାକୁ ଚିରନ୍ତନ ଓ ଅପରିବର୍ତ୍ତିତ ବା ଅପରିବର୍ତ୍ତନୀୟ ଘଟଣା ବୋଲି ଧରି ସମାଜରେ କନ୍ଦକ ସୃଷ୍ଟି କରିବାକୁ ତେଣୁ ଅନେକ ବୁଦ୍ଧିମାନ ଓ ବିଚାରବନ୍ତ ଲୋକ ଏବେ ଆଉ ପସନ୍ଦ କରନ୍ତି ନାହିଁ ।

SubQuestion No : 139

Q.139	ଅନୁଛେଦରୁ ଆମେ କଣ ବାଣୀ ପାଇବା ?
Ans	<input checked="" type="checkbox"/> 1. କେବଳ ଧନ ହିଁ ସଫଳତା <input checked="" type="checkbox"/> 2. ସଚେତନ ଚିନ୍ତା ଦ୍ୱାରା ସମାଜ ଉନ୍ନତ <input checked="" type="checkbox"/> 3. ଅନ୍ଧବିଶ୍ୱାସ ଅନୁସରଣ କରିବା <input checked="" type="checkbox"/> 4. ସମାଜ ପରିବର୍ତ୍ତନ

Question Type :	MCQ
Question ID :	4410091739105
Option 1 ID :	4410096858026
Option 2 ID :	4410096858024
Option 3 ID :	4410096858023
Option 4 ID :	4410096858025
Status :	Answered
Chosen Option :	2

Comprehension:

ନିମ୍ନୋକ୍ତ ଅନୁଛେଦକୁ ପଢ଼ି ସମସ୍ତ ପ୍ରଶ୍ନଗୁଡ଼ିକର ଉତ୍ତର ଚୟନ କର ।

ମନୁଷ୍ୟ ନିତାନ୍ତ ଭାବରେ ଗୋଷ୍ଠିକ ଜୀବ । ସେ ସ୍ୱତନ୍ତ୍ର ରହିବାକୁ ଚାହେଁ, କିନ୍ତୁ ଏକା ରହିବାକୁ ଚାହେଁନା । ଆମେ ଘରଟିଏ କରି ଚାରିପାଖ ପାଖରେ ବାଡ଼ ବା ପାଚେରି ଘେରାଇ ଦେଉ; ଆମର ସ୍ୱକୀୟ ସ୍ୱାତନ୍ତ୍ର୍ୟର କର୍ତ୍ତାପତାକା ଉଡ଼ାଇ; କିନ୍ତୁ ଯେତେ ସ୍ୱାତନ୍ତ୍ର୍ୟ ଚାହେଁଲେ ମଧ୍ୟ କେହି ନିର୍ଜନ ମନୁଷ୍ୟରେ ବା ଶୁଣାମରେ ଘର କରେନା । କାରଣ ମନୁଷ୍ୟ ସ୍ୱାତନ୍ତ୍ର୍ୟ ଚାହେଁ, ତା ସଙ୍ଗେ ସଙ୍ଗେ ସାମୂହ୍ୟ ବି ଚାହେଁ । ସିନ୍ଧୁର ଅଗଣିତ ବିନ୍ଦୁ ସିନ୍ଧୁରେ ମିଶିଗଲାପରି ସେ ନିଜର ସଭା ଭୁଲି ଯିବାକୁ ଚାହେଁନା । ସେ ସିନ୍ଧୁତ୍ର ଚାହେଁ, ବିନ୍ଦୁତ୍ର ମଧ୍ୟ ଚାହେଁ । ସମାଜର ପ୍ରତ୍ୟେକ ବ୍ୟକ୍ତି ଅପର ବ୍ୟକ୍ତିକୁ ଅବିଶ୍ୱାସ ବା ହିଂସାର ଦୃଷ୍ଟିରେ ଦେଖିପାରେ; କିନ୍ତୁ ପ୍ରତ୍ୟେକ ସମସ୍ତ ଭାବରେ ସମାଜକୁ ଚାହେଁନ୍ତି । ଏକତ୍ରିତ ଜନତାର ଏକ ସ୍ୱକୀୟ ପ୍ରୟୋଜନ ଓ ସୌନ୍ଦର୍ଯ୍ୟ ଅଛି । ମେଳାରେ ଲୋକେ ଲୋକକୁହିଁ ଦେଖିବାକୁ ବୋହୁନ୍ତି । ବ୍ୟକ୍ତି ଓ ସମସ୍ତ ଗଛ ଓ ଡା'ର ଡାଳପରି, ପରସ୍ପରର ଅଙ୍ଗାଙ୍ଗୀ । ସମାଜର ଏକକ କୁଟୁମ୍ବ, କୁଟୁମ୍ବର କେନ୍ଦ୍ର ନାହିଁ । ଏବେବି ପୃଥିବୀପୃଷ୍ଠରେ ଅନେକ ଗ୍ରାମ ଅଛି, ଯେଉଁଠି ସାରା ଗ୍ରାମଟି ଗୋଟିଏ କୁଟୁମ୍ବ, ପୃଥିବୀ ପୃଷ୍ଠରେ ଅର୍ଥାତ୍ ଗୋଟିଏ ସୁଗୁରୁ ପ୍ରସାରିତ, ଲକ୍ଷ ଲକ୍ଷ ବର୍ଷଧରି ଏକ ଏକ ନରନାରୀ ଯୁଦ୍ଧ ସୁଗୁରୁ କୁଟୁମ୍ବର ସଂପ୍ରସାରଣ ହୋଇ କୋଟି କୋଟି ସଂଖ୍ୟାରେ ଜାତି ଗଢ଼ି ଉଠିଛି । ପୁରାଣରେ ଯେଥିପାଇଁ ଦିତି, ଅଦିତି ତୁଳ ଭଉଣୀଠାରୁ ଦୈତ୍ୟ ଓ ଦେବତାମାନଙ୍କର ଉତ୍ପତ୍ତି ବର୍ଣ୍ଣିତ ହୋଇଅଛି । ଇଂରେଜ ଓ ଜର୍ମାନ, ଗତ ଦୁଇଟି ମହାଯୁଦ୍ଧରେ ପରସ୍ପର ନାଶ-ନେଉଳପରି ଗଳା କଟାକଟି କଲେହେଁ ସେମାନଙ୍କର ରକ୍ତ ଏକ । ବହୁ ସହସ୍ର ବର୍ଷ ପୂର୍ବେ ସେମାନଙ୍କର ଜନନୀ ବୋଧହୁଏ ଏକ ଥିଲା । ସ୍ୱାର୍ଥ ଓ ସ୍ୱାତନ୍ତ୍ର୍ୟ ଇଚ୍ଛା ଯୋଗୁ କୁଟୁମ୍ବ ଯେପରି ଫଡ଼ାଫଡ଼ା ହୁଏ, ସମାଜ ମଧ୍ୟ ସେହିପରି ରାଷ୍ଟ୍ରରେ ବିଭକ୍ତ ହୋଇ ଲଢ଼େଇ ପାଇଁ ଡିଆର ହୁଏ । ଖ୍ରୀଷ୍ଟୀୟ ପୁରାଣ ଅନୁସାରେ ସମଗ୍ର ମାନବ ଜାତି ଆଡ଼ାମ୍ ଓ ଇଭ୍ ଏହି ଆଦିମ ନରନାରୀ ସୁଗୁରୁ ଉତ୍ପନ୍ନ । ପୃଥିବୀର ଶତ ଶତ ଭିନ୍ନ ଭିନ୍ନ ଭାଷା, ଭିନ୍ନ ଭିନ୍ନ ଧର୍ମ, ଆଚାର, ବ୍ୟବହାର ପୁଣି ତମତାର ଭିନ୍ନ ଭିନ୍ନ ବର୍ଷ ଓ ପୁଞ୍ଜମଣ୍ଡଳର ଗଠନ ବୈଚିତ୍ର୍ୟ ଦେଖିଲେ ବିଶ୍ୱାସ କରିବାକୁ କଷ୍ଟ ହୁଏ ଯେ, ଆମେ ସମଗ୍ର ମାନବ ଜାତି ଏକ ବାପ ମା'ପୁଁ ଜାତ । ସେ ଯାହାହେଉ; ଇତିହାସ ଆଲୋଚନା କଲେ ଏତିକି ଅନୁତଃ ଜଣାପଡ଼ୁଛି ଯେ, ପୃଥିବୀରେ ଦିନେ ଏତେ ଧର୍ମ ନଥିଲା କି ଏତେ ଭାଷା ବି ନଥିଲା – ଯେଉଁ ଧର୍ମ ଓ ଭାଷା ହିଁ ଆଜି ମନୁଷ୍ୟ ମନୁଷ୍ୟ ଭିତରେ ସହସ୍ର ଅଲଂଘ୍ୟ ପାଚେରିର କାମ କରୁଛନ୍ତି । ଧର୍ମ ଓ ଭାଷାଗୁଡ଼ିକ ଗଣନୀୟ କାଳ ଭିତରେହିଁ ଜନ୍ମ ଓ ଅଭିବୃଦ୍ଧି ପାଇଛନ୍ତି । ତତୁର୍ଦ୍ଦଶ ଶତାବ୍ଦୀ ପର୍ଯ୍ୟନ୍ତ ଇଉରୋପର ବିଶ୍ୱବିଖ୍ୟାତ ଭାଷାଗୁଡ଼ିକର ସଭାହିଁ ନଥିଲା । ଆଧୁନିକ ଭାରତର ଭାଷା ଗୁଡ଼ିକର କଥାହିଁ ସେହିପରି । ବଙ୍ଗାଳୀ, ଓଡ଼ିଆ ଓ ବିହାରୀ ଛଅଶ ବର୍ଷ ତଳେ ଏକ ଭାଷାରେ କଥାଭାଷା ହେଉଥିଲେ । ଏବେ କିନ୍ତୁ ନିକ ନିକର ସ୍ୱତନ୍ତ୍ର ଭାଷାର ଦ୍ୱାହି ଦେଇ ସେମାନେ ପରସ୍ପରର ମୁଣ୍ଡ ଫଟେଇବାକୁ ସଦା ଜାଗ୍ରତ । ଧର୍ମର କଥାବି ସେହିପରି । ମାନବିକ ସଭ୍ୟତା ଅନୁତଃ ସାତ ହଜାର ବର୍ଷର; କିନ୍ତୁ ଖ୍ରୀଷ୍ଟଧର୍ମର ଜନ୍ମ ମାତ୍ର ୧୯ ଶହ ବର୍ଷ ତଳେ, ଇସଲାମ୍‌ର ବାର ଶହ ବର୍ଷ ତଳେ, କିନ୍ତୁ ଏ ଦୁଇଟି ଧର୍ମ ଯୋଗୁଁ ପୃଥିବୀରେ ଯେତେ ରକ୍ତପାତ ରାଜା ରାଜାର ଲଢ଼େଇ ଯୋଗୁଁ ବୋଧହୁଏ ସେତେ ହୋଇନାହିଁ । ଧର୍ମ ଓ ଭାଷାକୁ ଚିରନ୍ତନ ଓ ଅପରିବର୍ତ୍ତିତ ବା ଅପରିବର୍ତ୍ତନୀୟ ଘଟଣା ବୋଲି ଧରି ସମାଜରେ କନ୍ଦଳ ସୃଷ୍ଟି କରିବାକୁ ତେଣୁ ଅନେକ ବୁଦ୍ଧିମାନ ଓ ବିଚାରବନ୍ତ ଲୋକ ଏବେ ଆଉ ପସନ୍ଦ କରନ୍ତି ନାହିଁ ।

SubQuestion No : 140	
Q.140	ଅନୁଛେଦର ପ୍ରଧାନ ଉଦ୍ଦେଶ୍ୟ କ'ଣ ?
Ans	<input checked="" type="checkbox"/> 1. ପ୍ରାକୃତିକ ଦୁର୍ଘଟଣା <input checked="" type="checkbox"/> 2. ସମାଜର ମନୋରଞ୍ଜନ <input checked="" type="checkbox"/> 3. ମଣିଷର ଚିନ୍ତାଧାରା ସମାଜକୁ ପ୍ରଭାବିତ କରିବା <input checked="" type="checkbox"/> 4. ବୈଜ୍ଞାନିକ ଆବିଷ୍କାର

Question Type :	MCQ
Question ID :	4410091739106
Option 1 ID :	4410096858029
Option 2 ID :	4410096858027
Option 3 ID :	4410096858030
Option 4 ID :	4410096858028
Status :	Answered
Chosen Option :	3

Section : Computer

Q.141 What is the keyboard shortcut to begin editing text within a selected text box in PowerPoint (Microsoft Office 2021)?

Ans 1. F1

2. F11

3. F2

4. F8

Question Type : **MCQ**

Question ID : **441009937115**

Option 1 ID : **4410093702207**

Option 2 ID : **4410093702210**

Option 3 ID : **4410093702208**

Option 4 ID : **4410093702209**

Status : **Answered**

Chosen Option : **3**

Q.142 Identify the command to start a presentation in Presenter View in MS PowerPoint.

Ans 1. Alt+F5

2. Shift+F5

3. F5

4. Ctrl+H

Question Type : **MCQ**

Question ID : **441009992295**

Option 1 ID : **4410093921322**

Option 2 ID : **4410093921321**

Option 3 ID : **4410093921320**

Option 4 ID : **4410093921323**

Status : **Answered**

Chosen Option : **3**

Q.143 Which of the following procedures accurately sets a new font and size as the default for all new documents created in MS-Word, without requiring the user to apply styles or open templates manually each time?

- Ans**
- 1. Click the Design tab → Select 'Fonts' → Create a New Theme Font with desired font settings → Save and apply the new theme globally
 - 2. Right-click any selected text → Choose 'Font...' → Change font and size → Click OK
 - 3. Go to the Home tab → Click the small launcher arrow in the Font group → Choose desired font and size → Click 'Set As Default' → Select 'All documents based on Normal template' → Click OK
 - 4. Highlight text → Use the Font group to set desired font and size → Save the file as a new Word Template (.dotx) and manually use it each time a new document is needed

Question Type :	MCQ
Question ID :	441009940067
Option 1 ID :	4410093713905
Option 2 ID :	4410093713906
Option 3 ID :	4410093713904
Option 4 ID :	4410093713907
Status :	Answered
Chosen Option :	3

Q.144 What is the first step to create a list from existing text in Microsoft Word?

- Ans**
- 1. Open the 'View' tab
 - 2. Click 'Save As'
 - 3. Select the text you want to change into a list
 - 4. Press Ctrl + Enter

Question Type :	MCQ
Question ID :	441009941208
Option 1 ID :	4410093718492
Option 2 ID :	4410093718491
Option 3 ID :	4410093718490
Option 4 ID :	4410093718489
Status :	Answered
Chosen Option :	1

Q.145	Which shortcut key is used to paste copied content?
Ans	<input type="checkbox"/> 1. Ctrl + F
	<input checked="" type="checkbox"/> 2. Ctrl + V
	<input type="checkbox"/> 3. Ctrl + S
	<input type="checkbox"/> 4. Ctrl + C

Question Type :	MCQ
Question ID :	44100989965
Option 1 ID :	441009358021
Option 2 ID :	441009358019
Option 3 ID :	441009358018
Option 4 ID :	441009358020
Status :	Answered
Chosen Option :	2

Q.146	Which of the following is a valid method to insert a new column in MS-Excel 2021?
Ans	<input type="checkbox"/> 1. Select any cell in the row → Go to Data tab → Click Sort A to Z
	<input checked="" type="checkbox"/> 2. Select a cell in the column → Go to Home tab → Click Insert → Choose Insert Sheet Columns
	<input type="checkbox"/> 3. Press F1 while the column is selected to open the Insert dialog box
	<input type="checkbox"/> 4. Click the bottom-right corner of a cell → Drag the fill handle upward

Question Type :	MCQ
Question ID :	441009979948
Option 1 ID :	4410093872303
Option 2 ID :	4410093872302
Option 3 ID :	4410093872305
Option 4 ID :	4410093872304
Status :	Not Answered
Chosen Option :	--

Q.147	What does the shortcut Ctrl + B do in MS Word?
Ans	<input type="checkbox"/> 1. Copies the text
	<input type="checkbox"/> 2. Changes font color
	<input type="checkbox"/> 3. Makes text italic
	<input checked="" type="checkbox"/> 4. Bold the selected text

Question Type :	MCQ
Question ID :	441009925404
Option 1 ID :	4410093655743
Option 2 ID :	4410093655744
Option 3 ID :	4410093655741
Option 4 ID :	4410093655742
Status :	Answered
Chosen Option :	4

Q.148 Which of the following is not a standard component of an e-mail's structure?

- Ans**
- 1. Subject line
 - 2. Sender's address
 - 3. Operating System version
 - 4. Attachment option

Question Type :	MCQ
Question ID :	4410091211474
Option 1 ID :	4410094779394
Option 2 ID :	4410094779395
Option 3 ID :	4410094779397
Option 4 ID :	4410094779396
Status :	Answered
Chosen Option :	3

Q.149 Which transmission media is commonly used in WAN for long-distance communication?

- Ans**
- 1. HDMI cables
 - 2. Unshielded twisted pair
 - 3. Infrared waves
 - 4. Fibre optic cables

Question Type :	MCQ
Question ID :	441009939454
Option 1 ID :	4410093711475
Option 2 ID :	4410093711473
Option 3 ID :	4410093711476
Option 4 ID :	4410093711474
Status :	Answered
Chosen Option :	3

Q.150 When editing a presentation, you paste text from MS Word into an MS PowerPoint 2019 slide. Which paste option retains the PowerPoint theme's font and formatting rather than Word's?

- Ans**
- 1. Keep Text Only
 - 2. Merge Formatting
 - 3. Use Destination Theme
 - 4. Keep Source Formatting

Question Type :	MCQ
Question ID :	4410091203603
Option 1 ID :	4410094747920
Option 2 ID :	4410094747918
Option 3 ID :	4410094747919
Option 4 ID :	4410094747917
Status :	Not Answered
Chosen Option :	--

Q.151 What does the keyboard shortcut Ctrl + V do?

- Ans**
- 1. Copies the selected item
 - 2. Views file properties
 - 3. Cuts the selected item
 - 4. Pastes the selected item

Question Type :	MCQ
Question ID :	441009302992
Option 1 ID :	4410091178562
Option 2 ID :	4410091178563
Option 3 ID :	4410091178560
Option 4 ID :	4410091178561
Status :	Answered
Chosen Option :	4

Q.152 In Microsoft Word, which keyboard shortcut is used to copy selected text?

- Ans
- 1. Ctrl + Z
 - 2. Ctrl + X
 - 3. Ctrl + C
 - 4. Ctrl + V

Question Type :	MCQ
Question ID :	441009941747
Option 1 ID :	4410093720651
Option 2 ID :	4410093720648
Option 3 ID :	4410093720650
Option 4 ID :	4410093720649
Status :	Answered
Chosen Option :	3

Q.153 Which menu in Microsoft PowerPoint is used to insert sound or movie clips into a presentation?

- Ans
- 1. File
 - 2. View
 - 3. Tools
 - 4. Insert

Question Type :	MCQ
Question ID :	441009930339
Option 1 ID :	4410093675224
Option 2 ID :	4410093675225
Option 3 ID :	4410093675223
Option 4 ID :	4410093675222
Status :	Answered
Chosen Option :	3

Q.154 Which Windows feature best helps a government office organize and access a large volume of documents easily for non-technical staff?

- Ans
- ✓ 1. File Explorer with Quick Access and Libraries
 - ✗ 2. Control Panel for system settings
 - ✗ 3. Command Prompt for manual file management
 - ✗ 4. Third-party tools for file management

Question Type :	MCQ
Question ID :	441009465447
Option 1 ID :	4410091820364
Option 2 ID :	4410091820366
Option 3 ID :	4410091820365
Option 4 ID :	4410091820367
Status :	Not Answered
Chosen Option :	--

Q.155 Expand the abbreviation BIOS.

- Ans
- ✗ 1. Basic Interface Output System
 - ✗ 2. Build Input Output Sample
 - ✓ 3. Basic Input/Output System
 - ✗ 4. Build Input/Output Structure

Question Type :	MCQ
Question ID :	441009928935
Option 1 ID :	4410093669711
Option 2 ID :	4410093669710
Option 3 ID :	4410093669709
Option 4 ID :	4410093669712
Status :	Answered
Chosen Option :	3

Q.156 How can you quickly increase font size in MS Word 2021 without using the font size dropdown?

- Ans**
- 1. Ctrl + B
 - 2. Ctrl + Shift + <
 - 3. Ctrl + I
 - 4. Ctrl + Shift + >

Question Type :	MCQ
Question ID :	441009383557
Option 1 ID :	4410091499822
Option 2 ID :	4410091499820
Option 3 ID :	4410091499823
Option 4 ID :	4410091499821
Status :	Answered
Chosen Option :	4

Q.157 Which of the following actions will NOT start Edit mode in MS Excel 2021?

- Ans**
- 1. Pressing Ctrl + E while the cell is selected
 - 2. Selecting the cell and pressing the F2 key
 - 3. Double-clicking directly on the cell you want to edit
 - 4. Selecting the cell and clicking in the formula bar

Question Type :	MCQ
Question ID :	441009977657
Option 1 ID :	4410093863377
Option 2 ID :	4410093863376
Option 3 ID :	4410093863374
Option 4 ID :	4410093863375
Status :	Answered
Chosen Option :	1

Q.158 Identify the file types which are created when we save a complete web page using Ctrl+S in Chrome.

Ans ✓ 1. .html and a folder with assets

✗ 2. .html and .http

✗ 3. .zip with all files inside

✗ 4. .docx and .png

Question Type : **MCQ**

Question ID : **441009338380**

Option 1 ID : **4410091319486**

Option 2 ID : **4410091319484**

Option 3 ID : **4410091319487**

Option 4 ID : **4410091319485**

Status : **Answered**

Chosen Option : **4**

Q.159 Identify the recent world wide web version from the following.

Ans ✓ 1. Web 3.0

✗ 2. Web 5.0

✗ 3. Web 4.0

✗ 4. Web 2.0

Question Type : **MCQ**

Question ID : **441009948141**

Option 1 ID : **4410093746066**

Option 2 ID : **4410093746067**

Option 3 ID : **4410093746065**

Option 4 ID : **4410093746068**

Status : **Not Answered**

Chosen Option : **--**

Q.160 Which of the following shortcut keys is used to display the Save As dialog box in MS-Excel Workbook?

Ans 1. F12

2. F7

3. F11

4. F1

Question Type : **MCQ**

Question ID : **441009970639**

Option 1 ID : **4410093835681**

Option 2 ID : **4410093835682**

Option 3 ID : **4410093835680**

Option 4 ID : **4410093835679**

Status : **Answered**

Chosen Option : **1**

Q.161 Which of the following best describes a web browser?

Ans 1. Linux

2. A file management system

3. A software used to design websites

4. A tool to access and navigate the Internet and WWW

Question Type : **MCQ**

Question ID : **4410091387714**

Option 1 ID : **4410095481533**

Option 2 ID : **4410095481532**

Option 3 ID : **4410095481530**

Option 4 ID : **4410095481531**

Status : **Answered**

Chosen Option : **4**

Q.162 What is the effect of pressing the F2 key while a cell is selected in Excel?

Ans 1. It opens the help window

2. It deletes the content in the cell

3. It enters formula mode

4. It allows editing inside the cell

Question Type : **MCQ**

Question ID : **441009966005**

Option 1 ID : **4410093817236**

Option 2 ID : **4410093817234**

Option 3 ID : **4410093817235**

Option 4 ID : **4410093817237**

Status : **Answered**

Chosen Option : **4**

Q.163	What does a Wide Area Network (WAN) typically connect?
Ans	<input checked="" type="checkbox"/> 1. Devices connected without cables <input checked="" type="checkbox"/> 2. Only mobile phones in one area <input checked="" type="checkbox"/> 3. Devices within one room only <input checked="" type="checkbox"/> 4. Computers in different cities or countries

Question Type :	MCQ
Question ID :	441009966160
Option 1 ID :	4410093817850
Option 2 ID :	4410093817851
Option 3 ID :	4410093817848
Option 4 ID :	4410093817849
Status :	Answered
Chosen Option :	4

Q.164	How do you apply word wrapping to a text box in MS PowerPoint?
Ans	<input checked="" type="checkbox"/> 1. There is no option to wrap text in PowerPoint. <input checked="" type="checkbox"/> 2. Use the Wrap Text button in the Home tab <input checked="" type="checkbox"/> 3. Right-click the text box and choose Wrap Text <input checked="" type="checkbox"/> 4. Text automatically wraps in the text box when the box is resized

Question Type :	MCQ
Question ID :	441009924209
Option 1 ID :	4410093650995
Option 2 ID :	4410093650993
Option 3 ID :	4410093650992
Option 4 ID :	4410093650994
Status :	Not Answered
Chosen Option :	--

Q.165	Which of the following is the property of orientation of a page in MS-Word 2019?
Ans	<input checked="" type="checkbox"/> 1. Right margin <input checked="" type="checkbox"/> 2. Top <input checked="" type="checkbox"/> 3. Landscape <input checked="" type="checkbox"/> 4. Bottom

Question Type :	MCQ
Question ID :	441009963409
Option 1 ID :	4410093806977
Option 2 ID :	4410093806974
Option 3 ID :	4410093806975
Option 4 ID :	4410093806976
Status :	Answered
Chosen Option :	3

Q.166	What is the full form of GUI?
Ans	<p>✓ 1. Graphical User Interface</p> <p>✗ 2. Graphical Unit Interchange</p> <p>✗ 3. Graphical Unit Interface</p> <p>✗ 4. Graphical Universal Interface</p>

Question Type :	MCQ
Question ID :	441009929036
Option 1 ID :	4410093670109
Option 2 ID :	4410093670108
Option 3 ID :	4410093670110
Option 4 ID :	4410093670111
Status :	Answered
Chosen Option :	1

Q.167	What happens to the computer when it is put into Sleep mode in Windows 11 Operating System?
Ans	<p>✓ 1. The system enters a low-power state, keeping all work and applications ready in the RAM.</p> <p>✗ 2. The display is turned off, but the CPU continues to run at full speed.</p> <p>✗ 3. All open programs and files are saved to the hard disk, and the system is powered off completely.</p> <p>✗ 4. The computer completely shuts down and restarts the operating system instantly when turned on.</p>

Question Type :	MCQ
Question ID :	4410091544012
Option 1 ID :	4410096099149
Option 2 ID :	4410096099150
Option 3 ID :	4410096099148
Option 4 ID :	4410096099147
Status :	Answered
Chosen Option :	2

Q.168 In printing one or several workbooks in MS Excel, which keyboard key is held down and then clicked on the name of each workbook to print, and then Print is selected?

- Ans**
- 1. Ctrl
 - 2. Tab
 - 3. Alt
 - 4. Shift

Question Type :	MCQ
Question ID :	441009970629
Option 1 ID :	4410093835639
Option 2 ID :	4410093835642
Option 3 ID :	4410093835640
Option 4 ID :	4410093835641
Status :	Answered
Chosen Option :	3

Q.169 To enter data on a new line within a cell in MS Excel, enter a line break by pressing _____.

- Ans**
- 1. CTRL+ENTER
 - 2. ALT+ENTER
 - 3. ALT+F2
 - 4. CTRL+ALT+TAB

Question Type :	MCQ
Question ID :	441009975222
Option 1 ID :	4410093853913
Option 2 ID :	4410093853915
Option 3 ID :	4410093853914
Option 4 ID :	4410093853916
Status :	Answered
Chosen Option :	2

Q.170 Which built-in Windows tool helps protect the system from malware and viruses?

- Ans
- 1. Windows Applications
 - 2. Windows Defender Firewall
 - 3. Disk Cleanup
 - 4. Task Manager

Question Type :	MCQ
Question ID :	441009486526
Option 1 ID :	4410091901477
Option 2 ID :	4410091901478
Option 3 ID :	4410091901480
Option 4 ID :	4410091901479
Status :	Answered
Chosen Option :	2

Q.171 When a user manually drags a vertical border line within a Microsoft Word 2016 table, what dimension are they primarily adjusting?

- Ans
- 1. The table position on the page
 - 2. The width of the column
 - 3. The cell vertical alignment
 - 4. The height of the row

Question Type :	MCQ
Question ID :	441009851181
Option 1 ID :	4410093357695
Option 2 ID :	4410093357694
Option 3 ID :	4410093357696
Option 4 ID :	4410093357693
Status :	Answered
Chosen Option :	2

Q.172 Which of the following statements correctly distinguishes between a slide transition and an animation in MS PowerPoint 2021?

- Ans**
- 1. Transitions are applied only to text placeholders; animations are used exclusively for multimedia content like videos or audio.
 - 2. Transitions determine the text font and color of each slide; animations adjust the slide layout and theme design.
 - 3. Transitions trigger sound effects between slides; animations automatically advance the entire presentation without user input.
 - 4. Transitions control how the presentation moves from one slide to the next; animations manage how individual objects appear, move, or disappear within a single slide.

Question Type :	MCQ
Question ID :	441009994679
Option 1 ID :	4410093930783
Option 2 ID :	4410093930784
Option 3 ID :	4410093930785
Option 4 ID :	4410093930782
Status :	Answered
Chosen Option :	4

Q.173 For applying superscript while working in MS-PowerPoint, which of the following keyboard shortcuts is used?

- Ans**
- 1. Press Ctrl and the Equal sign (=) at the same time.
 - 2. Press Ctrl and the Minus sign (-) at the same time.
 - 3. Press Ctrl, Shift, and the Plus sign (+) at the same time.
 - 4. Press Ctrl and the Plus sign (+) at the same time.

Question Type :	MCQ
Question ID :	441009975353
Option 1 ID :	4410093854437
Option 2 ID :	4410093854439
Option 3 ID :	4410093854440
Option 4 ID :	4410093854438
Status :	Answered
Chosen Option :	3

Q.174 Which of the following is the best example of a Wide Area Network (WAN)?

- Ans
- 1. Office intranet
 - 2. Internet
 - 3. Home Wi-Fi
 - 4. School network

Question Type :	MCQ
Question ID :	441009910327
Option 1 ID :	4410093595451
Option 2 ID :	4410093595454
Option 3 ID :	4410093595453
Option 4 ID :	4410093595452
Status :	Answered
Chosen Option :	2

Q.175 Which of the following cell references in Excel remains constant when copied across rows or columns in a formula?

- Ans
- 1. A1
 - 2. A\$1
 - 3. \$A1
 - 4. \$A\$1

Question Type :	MCQ
Question ID :	441009965560
Option 1 ID :	4410093815484
Option 2 ID :	4410093815485
Option 3 ID :	4410093815487
Option 4 ID :	4410093815486
Status :	Not Answered
Chosen Option :	--

Q.176 If you want to view the MS PowerPoint slides in full-screen mode without animations, which view should you use?

- Ans**
- 1. Outline View
 - 2. Slide Show View
 - 3. Reading View
 - 4. Presenter View

Question Type :	MCQ
Question ID :	441009924170
Option 1 ID :	4410093650842
Option 2 ID :	4410093650840
Option 3 ID :	4410093650841
Option 4 ID :	4410093650843
Status :	Answered
Chosen Option :	2

Q.177 How many computers can typically be connected in a LAN?

- Ans**
- 1. Only one computer
 - 2. Limited number
 - 3. Unlimited number
 - 4. Millions of computers globally

Question Type :	MCQ
Question ID :	441009963441
Option 1 ID :	4410093807100
Option 2 ID :	4410093807099
Option 3 ID :	4410093807098
Option 4 ID :	4410093807101
Status :	Answered
Chosen Option :	2

Q.178 On the Home tab of the Ribbon in Microsoft Word 2016, which group of icons is used to change text attributes like Bold, Italic and Underline?

Ans 1. Clipboard

2. Font

3. Paragraph

4. Styles

Question Type : **MCQ**

Question ID : **441009851278**

Option 1 ID : **4410093358087**

Option 2 ID : **4410093358084**

Option 3 ID : **4410093358086**

Option 4 ID : **4410093358085**

Status : **Answered**

Chosen Option : **2**

Q.179 Which of the following is the correct extension for the Text File format used in MS Excel 2013?

Ans 1. .xls

2. .xlsx

3. .xml

4. .csv

Question Type : **MCQ**

Question ID : **441009970649**

Option 1 ID : **4410093835720**

Option 2 ID : **4410093835719**

Option 3 ID : **4410093835721**

Option 4 ID : **4410093835722**

Status : **Answered**

Chosen Option : **2**

Test

Prime

By Adda247

Previous Year Papers PDF

PRACTICE MORE, SCORE HIGHER!



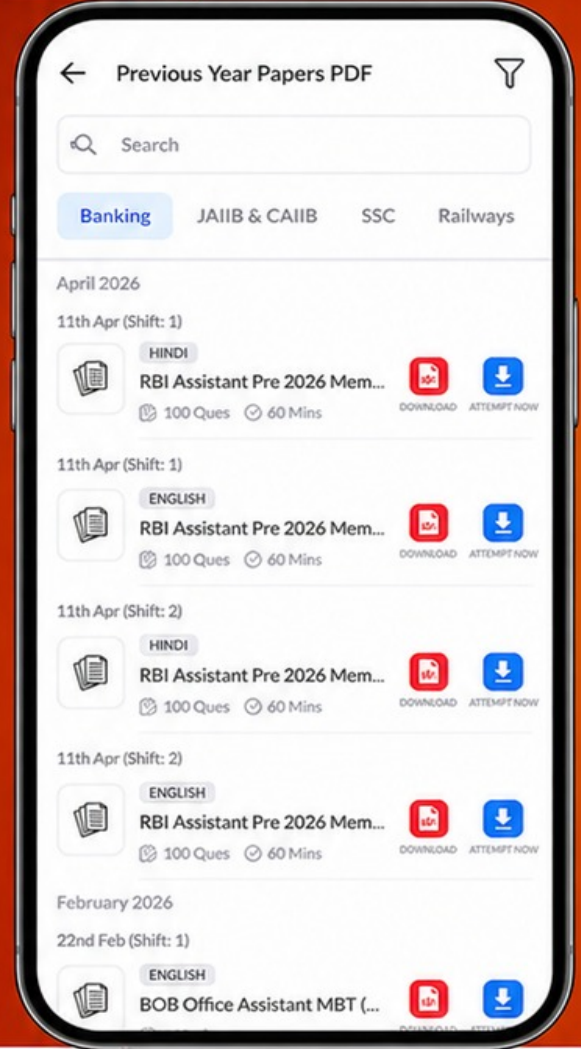
Free
25,000+
PDF's

High-Quality | Exam-Wise | Updated Regularly

ATTEMPT AS
MOCK



Turn PDFs into real exam experience.
Analyze. Improve. Succeed.



Topic-wise & Exam-wise PDFs



Download & Study Offline



Attempt as Mock & Track Score



Smart Analysis & Performance

AVAILABLE IN



Banking



SSC



Railway



Teaching



UGC



Agriculture



Nursing



Bihar



UP



Punjab



WB



Odisha



TN



AP & Telangana



Haryana



DOWNLOAD THE APP



Q.180	In Windows, which component primarily provides the graphical user interface that displays the desktop, taskbar, and Start Menu?
Ans	<p><input type="checkbox"/> 1. Local Security Policy</p> <p><input type="checkbox"/> 2. Windows Registry</p> <p><input checked="" type="checkbox"/> 3. Windows Explorer / File Explorer shell</p> <p><input type="checkbox"/> 4. Device Manager</p>

Question Type :	MCQ
Question ID :	4410091555877
Option 1 ID :	4410096146063
Option 2 ID :	4410096146061
Option 3 ID :	4410096146064
Option 4 ID :	4410096146062
Status :	Answered
Chosen Option :	4

