

**SSC
Stenographer 2020**

**Previous Year Paper
(11 Nov 2021 Shift 2)
Hindi**

Adda247

Adda247

Test Prime

ALL EXAMS, ONE SUBSCRIPTION



1,00,000+
Mock Tests



**Personalised
Report Card**



**Unlimited
Re-Attempt**



600+
Exam Covered



25,000+ Previous
Year Papers



500%
Refund



ATTEMPT FREE MOCK NOW

Stenographer 2020

11/11/2021-> (2:00 PM - 4:00 PM)

General Intelligence and Reasoning

Q.1)- Three statements are given, followed by three conclusions numbered I, II and III. Assuming the statements to be true, even if they seem to be at variance with commonly known facts, decide which of the conclusions logically follow(s) from the statements.

Statements:

All tractors are roads.

No road is a park.

No tractor is a vehicle.

Conclusions:

I. No vehicle is a tractor.

II. No tractor is a park.

III. Some roads are tractors.

1. Only conclusions I and III follow
2. Only conclusion III follows
3. Only conclusions II and III follow
4. All of the conclusions follow

Q.2)-

उस विकल्प आकृति का चयन करें, जिसमें दी गई आकृति अंतःस्थापित (embedded) है।

(घुमाने की अनुमति नहीं है)



- 1.
- 2.
- 3.
- 4.

Q.3)- उस विकल्प का चयन करें, जो तीसरे अक्षर-समूह से ठीक उसी प्रकार संबंधित है, जिस प्रकार दूसरा अक्षर-समूह पहले अक्षर-समूह से संबंधित है।

MOCK : NLXP :: DART : ?

1. VZIH 2. WZIG 3. ZYKI 4. WZJG

Q.4)- दिए गए पैटर्न का ध्यानपूर्वक अध्ययन करें और उस संख्या का चयन करें, जो इसमें प्रश्नवाचक चिह्न (?) के स्थान पर आएगी।

(13, 4, 18) (49, 24, 50) (87, 51, ?)

1. 69 2. 84 3. 76 4. 72

Q.5)- Three statements are given, followed by three conclusions numbered I, II and III. Assuming the statements to be true, even if they seem to be at variance with commonly known facts, decide which of the conclusions logically follow(s) from the statements.

Statements:

Some machines are coolers.

All coolers are robots.

Some microwaves are coolers.

Conclusions:

I. Some coolers are machines.

II. Some robots are machines.

III. No robot is a microwave.

1. Only conclusions I and II follow
2. Only conclusions I and III follow
3. All of the conclusions follow
4. Either conclusion I or III follows

Q.6)- उस संख्या का चयन करें, जो तीसरी संख्या से ठीक उसी प्रकार संबंधित है, जिस प्रकार दूसरी संख्या, पहली संख्या से संबंधित है।

14 : 238 :: 18 : ?

1. 405 2. 301 3. 342 4. 651

Q.7)- यदि 'लाल' को 'टमाटर', 'टमाटर' को 'मिठाई', 'मिठाई' को 'अच्छा' और 'अच्छा' को 'साफ़' कहा जाता है, तो रक्त का रंग कौन-सा होगा?

1. अच्छा 2. साफ़ 3. टमाटर 4. लाल

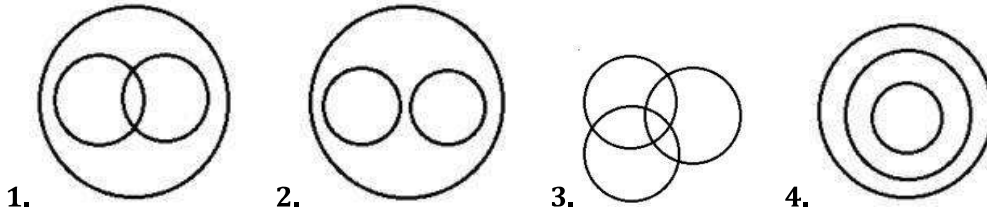
Q.8)- पाँच पेंसिल, A, B, C, D और E में D की लंबाई 10 cm है। A की लंबाई D की लंबाई से आधी है लेकिन C की लंबाई से दोगुनी है। E, C से 2 cm लंबी है। B की लंबाई A और E की लंबाई के योग के बराबर है। सबसे लंबी पेंसिल कौन-सी है?

1. D 2. C 3. E 4. B

Q.9)-

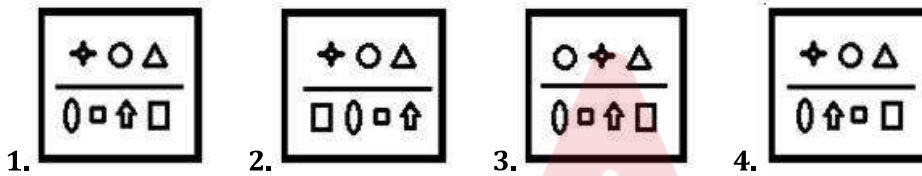
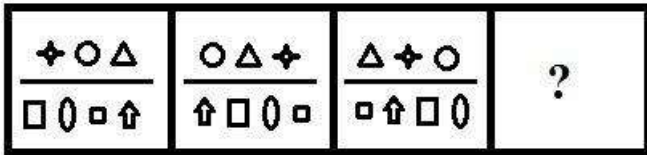
Select the Venn diagram that best illustrates the relationship between the following classes.

Eatables, Bananas, Fruits



Q.10)-

उस आकृति का चयन करें, जो निम्न आकृति श्रेणी में प्रश्नवाचक चिह्न (?) के स्थान पर होगी।



Q.11)-

वर्गों के उस समुच्चय का चयन करें, जिनके बीच का संबंध दिए गए वेन आरेख द्वारा सर्वोत्तम ढंग से निरूपित किया गया है।



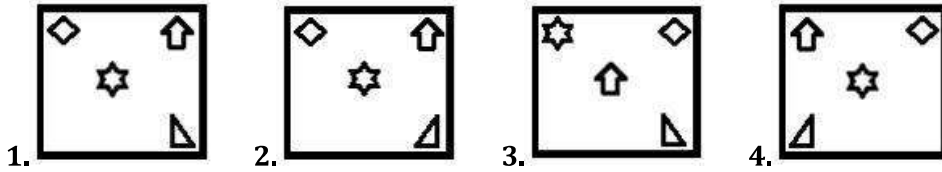
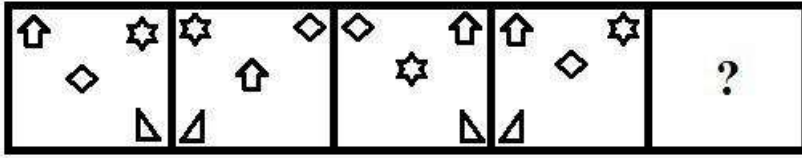
1. किसान, चाचा, पुरुष 2. किसान, बहनें, भाई 3. भाई, पिता, चाचा 4. माताएं, महिलाएं, भतीजे

Q.12)- पांच वस्तु P, Q, R, S और T में, Q का भार P से दोगुना है। S का भार Q से दोगुना है। R का भार T से आधा है। T का भार Q के बराबर है। इन पांच वस्तुओं में से कौन-सी वस्तु सबसे भारी है?

1. R 2. Q 3. T 4. S

Q.13)-

उस आकृति का चयन करें, जो निम्न आकृति श्रेणी में प्रश्नवाचक चिह्न (?) के स्थान पर होगी।



Q.14)- Select the correct option that indicates the arrangement of the following words in a logical and meaningful order.

1. Drive vehicle
2. Unlock vehicle
3. Start vehicle
4. Reach destination
5. Parking of vehicle

1. 2, 4, 1, 3, 5 2. 1, 5, 4, 3, 2 3. 2, 3, 1, 4, 5 4. 2, 3, 4, 1, 5

Q.15)- यदि 'A' का अर्थ 'जोड़ना' है, 'B' का अर्थ 'गुणा करना' है, 'C' का अर्थ 'घटाना' है और 'D' का अर्थ 'भाग देना' है, तो निम्न व्यंजक का मान ज्ञात करें।
43 A 22 C 15 B 4 A 72 D (10 C 2) = ?

1. 18 2. 14 3. 44 4. 32

Q.16)- किसी कमरे में, P, Q, R, S, T और U छह व्यक्ति बैठे हैं। पुरुषों और महिलाओं की संख्या समान है। कमरे में कम से कम एक विवाहित जोड़ा है। Q, P की बेटी है। S दो व्यक्तियों, यानी एक पुरुष और एक महिला का पिता है। P और T, U की बेटियाँ हैं। विवाहित जोड़ा कौन है?

1. U और S 2. P और S 3. Q और T 4. U और Q

Q.17)- निम्न में से कौन-सा अक्षर-समूह दी गई श्रेणी में प्रश्नवाचक चिह्न (?) के स्थान पर होगा?
JOD, FKZ, BGV, ?

1. YCR 2. XCS 3. XCR 4. WDR

Q.18)- आरती की ओर इशारा करते हुए, सुकन्या ने कहा, "वह मेरे पति की सास के पति की बेटी है"। आरती का सुकन्या से क्या संबंध है?

1. मामी 2. बहन 3. मां 4. ननद

Q.19)- मृदुल, पूर्व की ओर 145 m साइकिल चलाता है और फिर बाईं ओर मुड़ता है और 155 m साइकिल चलाता है। फिर से, वह बाईं ओर मुड़ता है और 225 m साइकिल चलाता है। वह अंततः बाईं ओर मुड़ता है और अपने घर तक पहुंचने के लिए 95 m साइकिल चलाता है। उसके घर और शुरुआती बिंदु के बीच सबसे छोटी दूरी ज्ञात करें।

1. 100 m 2. 60 m 3. 120 m 4. 140 m

Q.20)- पांच घर K, L, M, N और O एक पंक्ति में स्थित हैं, इन सभी का अग्र भाग उत्तर दिशा की ओर है। M, L के ठीक बाईं ओर पड़ोस में स्थित है। K ठीक O और M के बीच में स्थित है। N, K के दाईं ओर तीसरे स्थान पर स्थित है। कौन-सा घर बिल्कुल बीच में स्थित है?

1. K 2. L 3. M 4. N

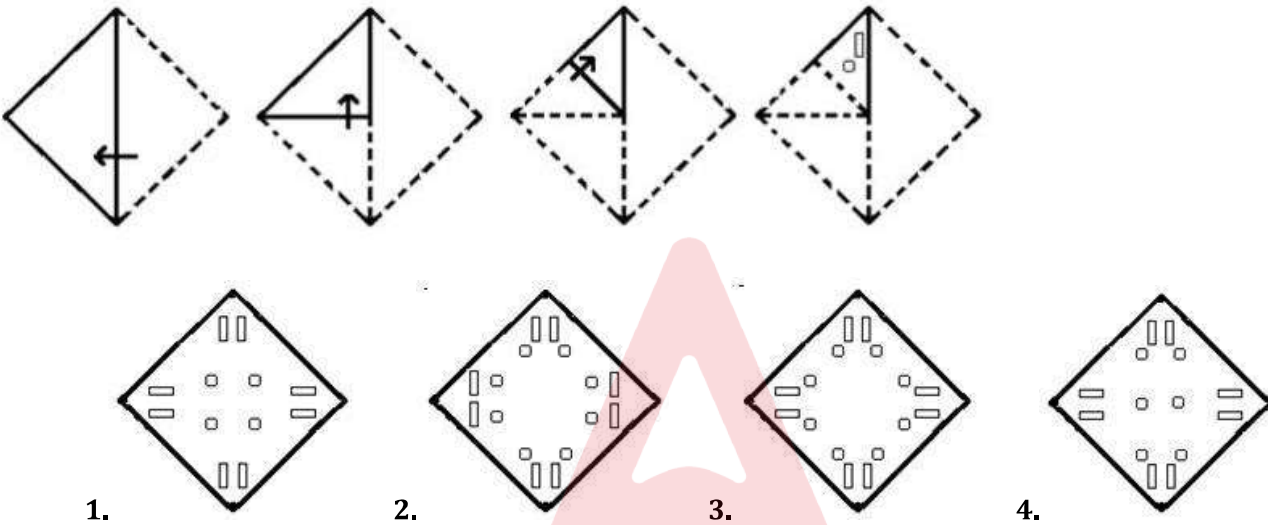
Q.21)- दिए गए पैटर्न का ध्यानपूर्वक अध्ययन करें और उस संख्या का चयन करें, जो इसमें प्रश्नवाचक चिह्न (?) के स्थान पर हो सकती है।

15 12 81
17 14 93
15 11 ?

1. 181 2. 97 3. 104 4. 113

Q.22)-

एक कागज को निम्न चित्र के अनुसार मोड़ा और काटा जाता है। यह कागज खोलने पर कैसा दिखेगा?



Q.23)- गणितीय चिह्नों के उस उचित संयोजन का चयन करें, जिसे निम्न समीकरण को संतुलित करने के लिए * के स्थान पर बाएं से दाएं क्रमिक रूप से रखा जा सकता है।
44 * 32 * 8 * 16 * 3 * 0

1. +, ÷, -, ×, = 2. +, ×, -, ÷, = 3. +, -, ×, ÷, = 4. ×, +, -, ÷, =

Q.24)- 'A + B' का मतलब 'A, B का पिता है'।

'A * B' का मतलब 'A, B की बेटी है'।

'A % B' का मतलब 'A, B का भाई है'।

यदि J + T % N % C * L * S है, तो J, S से किस प्रकार संबंधित है?

1. चाचा 2. साला 3. बेटा 4. दामाद

Q.25)- किसी निश्चित कूट भाषा में, 'YOUNGER' को 'AQWNECP' लिखा जाता है। उसी कूट भाषा में 'NUMBERS' को किस प्रकार लिखा जाएगा?

1. PWNDPCQ 2. PYOBGPQ 3. LWOBCEPU 4. PWOBCEPU

Q.26)-

जब दर्पण को चित्र के अनुसार MN पर रखा जाता है, तो दी गई आकृति का दर्पण में निर्मित प्रतिबिम्ब चयनित कीजिए।



1. 5 2 9 7 2 5 R 2. 2 2 9 4 2 5 R 3. 5 9 9 4 2 5 R 4. 5 2 9 4 2 5 R

Q.27)- 45 छात्र वाली कक्षा में, सभी छात्र शतरंज और बैडमिंटन में से एक या दोनों खेल में भाग लेते हैं। 11 छात्र दोनों खेलों में भाग लेते हैं, जबकि 17 छात्र केवल शतरंज में भाग लेते हैं। बैडमिंटन में भाग लेने वाले छात्रों की कुल संख्या ज्ञात करें।

1. 24 2. 30 3. 28 4. 26

Q.28)- निम्न में से कौन-सी संख्या दी गई श्रेणी में प्रश्नवाचक चिह्न (?) के स्थान पर होगी?

77, 78, 74, 83, 67, ?

1. 92 2. 188 3. 192 4. 88

Q.29)- दिए गए विकल्पों में से, उस संख्या का चयन करें, जो निम्न श्रृंखला में प्रश्नवाचक चिह्न (?) के स्थान पर आएगी।

2, 11, 28, 53, ?, 127

1. 92 2. 86 3. 98 4. 74

Q.30)- दिए गए पैटर्न का ध्यानपूर्वक अध्ययन करें और उस संख्या का चयन करें, जो इसमें प्रश्नवाचक चिह्न (?) के स्थान पर हो सकती है।

4 8 128

3 9 108

5 10 ?

1. 220 2. 205 3. 225 4. 236

Q.31)- निम्न में से कौन-सा अक्षर-समूह दी गई श्रेणी में प्रश्नवाचक चिह्न (?) के स्थान पर होगा?

DMKY, HQOC, MVTH, SBZN, ?

1. ZIGU 2. ZJGT 3. AIHU 4. ZKGV

Q.32)- आठ मित्र K, L, M, N, O, P, Q और R इसी क्रम में दक्षिणावर्त रूप से गोल मेज के पारित: एक दूसरे से समान दूरी पर केंद्र की ओर अभिमुख होकर बैठे हैं। यदि O दक्षिण-पूर्व दिशा में बैठा है, तो R किस दिशा की ओर अभिमुख होकर बैठा है?

1. उत्तर 2. पश्चिम 3. पूर्व 4. दक्षिण-पश्चिम

Q.33)- यदि $Z = Y > R = M$ और $G > H = Z = Q$ है, तो निम्न में से कौन-सा विकल्प सही नहीं है?

1. $G > Q$ 2. $Q > R$ 3. $H = Y$ 4. $R > Z$

Q.34)- उस विकल्प का चयन करें, जो तीसरे अक्षर-समूह से ठीक उसी प्रकार संबंधित है, जिस प्रकार दूसरा अक्षर-समूह पहले अक्षर-समूह से संबंधित है।

CARE : HUDF :: TOMB : ?

1. DPRX 2. EPRW 3. EQRX 4. FPSW

Q.35)- निम्न में से कौन-सा अक्षर-समूह दी गई श्रेणी में प्रश्नवाचक चिह्न (?) के स्थान पर होगा?

RTCQ, TWGV, VZKA, XCOF, ?

1. ZFTL 2. YFTK 3. ZGSL 4. ZFSK

Q.36)- उस विकल्प का चयन करें, जो तीसरे अक्षर-समूह से ठीक उसी प्रकार संबंधित है, जिस प्रकार दूसरा अक्षर-समूह पहले अक्षर-समूह से संबंधित है।

FRAGILE : RLIGFEA :: CAUTION : ?

1. UOTNICA 2. UTONICA 3. OTUNICA 4. UTOINCA

Q.37)- आठ व्यक्ति A, B, C, D, E, F, G और H, सीधी रेखा में उत्तर दिशा की ओर अभिमुख होकर बैठे हैं। C ठीक B और A के बीच में बैठा है। D ठीक B और H के बीच में बैठा है। E, A के बाईं ओर तीसरे स्थान पर बैठा है। B, A के दाईं ओर दूसरे स्थान पर बैठा है। G ठीक A और F के बीच में बैठा है। H किसी एक छोर पर बैठा है। दूसरे छोर पर कौन बैठा है?

1. F 2. G 3. B 4. E

Q.38)- दिए गए पैटर्न का ध्यानपूर्वक अध्ययन करें और उस संख्या का चयन करें, जो इसमें प्रश्नवाचक चिह्न (?) के स्थान पर हो सकती है।

55 63 ?

48 58 40

49 25 49

1. 51 2. 58 3. 49 4. 47

Q.39)- उस सही विकल्प का चयन करें, जो दिए गए शब्दों के तार्किक और सार्थक क्रम को दर्शाता है।

1. आभूषण (Jewellery)
2. धातु (Metal)
3. बेचना (Sell)
4. गलाना (Melt)
5. पॉलिश करना (Polish)

1. 2, 4, 5, 1, 3 2. 1, 4, 2, 5, 3 3. 1, 5, 3, 4, 2 4. 2, 4, 1, 5, 3

Q.40)- निम्न चार अक्षर-समूहों में से तीन किसी प्रकार समान हैं और एक असंगत है। उस असंगत अक्षर-समूह का चयन करें।

1. CFKR 2. WZFL 3. GJOV 4. SVAH

Q.41)- किसी निश्चित कूट भाषा में 'CURSOR' को '564' और 'BOY' को '126' लिखा जाता है। उसी कूट भाषा में 'FREE' को किस प्रकार लिखा जाएगा?

1. 154 2. 136 3. 130 4. 126

Q.42)- कौन-सी संख्या दी गई श्रेणी में प्रश्नवाचक चिह्न (?) के स्थान पर होगी?

14, 30, 64, 130, ?, 530, 1064

1. 464 2. 364 3. 164 4. 264

Q.43)- 19 फरवरी 2011 को सप्ताह का कौन-सा दिन था?

1. सोमवार 2. शनिवार 3. रविवार 4. मंगलवार

Q.44)- निम्न समीकरण को संतुलित करने के लिए किन दो चिह्नों को एक-दूसरे से और किन दो संख्याओं को एक-दूसरे से बदलना होगा?

$$35 + 15 - 4 \times 45 \div 5 = 98$$

1. 35 और 45; + और - 2. 15 और 5; × और + 3. 35 और 45; × और - 4. 15 और 35; × और ÷

Q.45)- निम्न में से कौन-सी संख्या दी गई श्रेणी में प्रश्नवाचक चिह्न (?) के स्थान पर होगी?

56, 59, 65, 68, 74, ?, 83

1. 78 2. 77 3. 85 4. 82

Q.46)- मीनल उत्तर की ओर 45 m चलती है और फिर वह बाईं ओर मुड़ती है और 35 m चलती है। वहां से, वह दाईं ओर मुड़ती है और 26 m चलती है और तब वह फिर से दाईं ओर मुड़ती है और 35 m चलती है। अंत में वह बाईं ओर मुड़ती है और अपने घर तक पहुंचने के लिए 17 m चलती है। वह शुरुआती बिंदु से कितनी दूरी पर है?

1. 83 m 2. 80 m 3. 88 m 4. 85 m

Q.47)- उस विकल्प का चयन करें, जो दिए गए शब्दों का अंग्रेजी शब्दकोश के अनुसार, उनका सही क्रम निरूपित करता है।

1. Logical
2. Logistics
3. Longevity
4. Locust
5. Loafer

1. 5, 4, 1, 2, 3 2. 3, 5, 1, 2, 4 3. 5, 4, 2, 1, 3 4. 5, 4, 2, 3, 1

Q.48)- Two statements are given, followed by three conclusions numbered I, II and III. Assuming the statements to be true, even if they seem to be at variance with commonly known facts, decide which of the conclusions logically follow(s) from the statements.

Statements:

Some carpenters are singers.

All singers are doctors.

Conclusions:

I. No doctor is a carpenter.

II. Some doctors are singers.

III. Some carpenters are doctors.

1. Only conclusion III follows
2. Only conclusions II and III follow
3. Only conclusion II follows
4. All of the conclusions follow

Q.49)- छह दोस्त A, B, C, D, E और F की औसत आय ₹6,500 है। B, D, E और F की कुल आय ₹25,000 है। यदि A की आय C की आय से ₹4,000 कम है, तो C की आय ज्ञात करें।

1. ₹9,000 2. ₹7,000 3. ₹8,000 4. ₹10,000

Q.50)- निम्न चार अक्षर-समूह युग्मों में से तीन किसी प्रकार समान हैं और एक असंगत है। उस असंगत अक्षर-समूह युग्म का चयन करें।

1. MAGIC : AMGCI 2. LOGIC : OLGCI 3. CREST : RCTES 4. FIRST : IFRTS

General Awareness

Q.1)- भारत की जनगणना 2011 के अनुसार, सिक्किम की जनसंख्या लगभग कितनी है?

1. 9.93 लाख 2. 6.11 लाख 3. 4.56 लाख 4. 2.37 लाख

Q.2)- गुप्त शासकों के शासन के संदर्भ में, 'भुक्ति' शब्द का अर्थ _____ होता था।

1. गाँव 2. प्रान्त 3. मृत्यु दंड 4. गुप्तचर

Q.3)- निम्न में से कौन-सा पूर्व-ऐतिहासिक स्थल, मिट्टी की सतहों पर खुर के निशान (hoof-marks) के रूप में मवेशियों के पालन का पुरातात्विक प्रमाण प्रदान करता है?

1. कोल्डिहवा 2. मेहरगढ़ 3. गुफकराल 4. महागड़ा

Q.4)- जनवरी 2020 में घोषित निम्न में से किस क्रिकेट खिलाड़ी ने आईसीसी प्लेयर ऑफ द ईयर 2019 के लिए सर गारफील्ड सोबर्स ट्रॉफी जीती?

1. विराट कोहली 2. बेन स्टोक्स 3. पैट कमिंस 4. रोहित शर्मा

Q.5)- निम्न में से किस भाषा को संविधान की आठवीं अनुसूची में सम्मिलित नहीं किया गया है?

1. संथाली 2. सिंधी 3. भोजपुरी 4. नेपाली

Q.6)- महान वैष्णव संत और सुधारक महापुरुष शंकरदेव ने निम्न में से कौन-सी नृत्य शैली की शुरुआत की थी?

1. ओडिसी 2. मणिपुरी 3. मोहिनीअट्टम 4. सत्त्रिया

Q.7)- निम्न में से किसे जिम्नोस्पर्म (Gymnosperms) के तहत वर्गीकृत किया गया है?

1. अल्वा (Ulva) 2. चारा (Chara) 3. पाइनस (Pinus) 4. फ्यूनेरिया (Funaria)

Q.8)- नाइट्रेट एस्टर _____ बनाने में प्रयुक्त होते हैं।

1. कीटनाशक (pesticides) 2. खाद (manure) 3. साबुन (soaps) 4. विस्फोटक (explosives)

Q.9)- भारतीय संविधान का निम्न भागों में से कौन-सा भाग इसके संशोधन के लिए प्रक्रियाओं का विवरण देता है?

1. भाग XX 2. भाग XV 3. भाग XIII 4. भाग XI

Q.10)- खाद्य निगम अधिनियम, 1964 के तहत खाद्यान्न और अन्य खाद्य पदार्थों को खरीदने, भंडारित करने, स्थानांतरित करने/ परिवहन करने, वितरित करने और बेचने के प्राथमिक कर्तव्य के साथ भारतीय खाद्य निगम (FCI) की स्थापना किस में वर्ष की गई थी?

1. 1964 2. 1967 3. 1966 4. 1965

Q.11)- जून 2020 में, निम्न में से किस संगठन ने यह घोषणा की कि वह जनवरी 2021 में 'द ग्रेट रीसेट' विषय के तहत दावोस में अपने अगले शिखर सम्मेलन की मेजबानी करेगा?

1. विश्व आर्थिक मंच 2. अंतरराष्ट्रीय मुद्रा कोष
3. विश्व स्वास्थ्य संगठन 4. विश्व बैंक

Q.12)- निम्न में से कौन-सी नदी हिमालय नदी प्रणाली की एक नदी नहीं है?

1. केन (Ken) 2. बेतवा (Betwa) 3. शेत्रुंजी (Shetrunji) 4. हिंडन (Hindan)

Q.13)- तीर्थयात्रा से संबंधित कर, जो धार्मिक भेदभाव पर आधारित था, अकबर ने किस वर्ष समाप्त कर दिया था?

1. 1567 2. 1572 3. 1568 4. 1563

Q.14)- निम्न में से किस राज्य में पारंपरिक रूप से 'खर्ची पूजा' नामक त्यौहार मनाया जाता है, जिसके अंतर्गत 14 देवताओं की 7 दिनों तक पूजा की जाती है?

1. ओडिशा 2. केरल 3. त्रिपुरा 4. झारखंड

Q.15)- निम्न में से कौन सी नदी, पटना के पास सोनपुर में गंगा में मिलती है?

1. महानंदा 2. घाघरा 3. रामगंगा 4. गंडक

Q.16)- अंतरराष्ट्रीय इकाई प्रणाली (International System of Units) में ऊर्जा की इकाई क्या है?

1. जूल 2. केल्विन 3. फारेनहाइट 4. सेल्सियस

Q.17)- निम्न में से कौन-सा अंग मानव शरीर में पित्त का उत्पादन करता है?

1. यकृत (Liver) 2. वृक्क (Kidney) 3. आमाशय (Stomach) 4. फेफड़े (Lungs)

Q.18)- निम्न में से किस विश्वविद्यालय ने 'खेलो इंडिया यूनिवर्सिटी गेम्स 2020' की पदक तालिका में शीर्ष स्थान प्राप्त किया?

1. जवाहरलाल नेहरू विश्वविद्यालय
2. सावित्रीबाई फुले विश्वविद्यालय
3. पंजाब विश्वविद्यालय 4. दिल्ली विश्वविद्यालय

Q.19)- जम्मू के किश्तवाड़ जिले में स्थित 'मचैल माता' का मंदिर किस देवी को समर्पित है?

1. लक्ष्मी 2. दुर्गा 3. हिडिम्बा 4. सीता

Q.20)- बोरलॉग पुरस्कार निम्न में से किस क्षेत्र में योगदान के लिए दिया जाता है?

1. खेल 2. कृषि 3. विज्ञान 4. फिल्म

Q.21)- नागालैंड राज्य दिवस किस दिन मनाया जाता है?

1. 24 मार्च 2. 1 दिसंबर 3. 23 मार्च 4. 15 अक्टूबर

Q.22)- दिसंबर 2020 तक, निम्न में से कौन शीर्ष उद्योग निकाय ASSOCHAM (भारतीय वाणिज्य एवं उद्योग मंडल) का अध्यक्ष है?

1. जे. के. मित्तल 2. उदय शंकर 3. विनीत अग्रवाल 4. निरंजन हीरानंदानी

Q.23)- मार्च 2020 में महाराष्ट्र सरकार ने _____ के हवाई अड्डे का नाम छत्रपति संभाजी महाराज के नाम पर रखने के प्रस्ताव को मंजूरी दी।

1. औरंगाबाद 2. जलगांव 3. अमरावती 4. कोल्हापुर

Q.24)- पंचायत का सदस्य बनने के लिए न्यूनतम आवश्यक आयु (संविधान द्वारा निर्धारित) क्या है?

1. 25 वर्ष 2. 21 वर्ष 3. 35 वर्ष 4. 18 वर्ष

Q.25)- अकबर के शासनकाल के दौरान, उनके दरबारी दासवंत _____ में अपने कौशल के लिए काफी प्रसिद्ध थे।

1. संगीत (music) 2. तीरंदाजी (archery) 3. चित्रकला (painting) 4. राजस्व प्रशासन (revenue administration)

Q.26)- निम्न में से किस संघ ने विश्व वन्यजीव दिवस 2020 पर 'यूनाइटेड फॉर बायोडायवर्सिटी' नामक एक गठबंधन शुरू किया है?

1. आसियान (ASEAN) 2. नाटो (NATO) 3. यूरोपियन कमीशन (European Commission)
4. सार्क (SAARC)

Q.27)- निम्न में किस शासक ने जयपुर में हवामहल का निर्माण करवाया था?

1. सवाई माधो सिंह 2. सवाई जय सिंह 3. सवाई प्रताप सिंह 4. सवाई मान सिंह

Q.28)- प्रत्येक वर्ष _____ को हिंसा से पीड़ित मासूम बच्चों की स्मृति में अंतरराष्ट्रीय दिवस मनाया जाता है।

1. 4 जून 2. 4 अप्रैल 3. 4 मार्च 4. 4 फरवरी

Q.29)- निम्न में से किसे जम्मू और कश्मीर तथा कुछ उत्तर-पूर्वी राज्यों के लिए परिसीमन आयोग का अध्यक्ष नियुक्त किया गया है?

1. दीपक गुप्ता 2. पिनाकी चंद्र घोष 3. आर.के. अग्रवाल 4. रंजना प्रकाश देसाई

Q.30)- 26 फरवरी 2020 को, निम्न में से किस टेनिस खिलाड़ी ने टेनिस से संन्यास लेने की घोषणा की है?

1. किम क्लिस्टर्स 2. मारिया शारापोवा 3. जस्टिन हेनिन 4. वीनस विलियम्स

Q.31)- _____ is the study of the distribution and determinants of health-related states or events in specified populations, and the application of this study to the control of health problems.

1. Saurology 2. Epidemiology 3. Haematology 4. Ontology

Q.32)- निर्वर्त में प्रकाश की चाल क्या होती है?

1. 199,792.458 km/s 2. 499,792.458 km/s 3. 299,792.458 km/s 4. 399,792.458 km/s

Q.33)- अंतरराष्ट्रीय खेलों में, लवलीना बोरगोहेन _____ में भारत का प्रतिनिधित्व करती हैं।

1. तीरंदाजी 2. जूडो 3. मुक्केबाजी 4. शूटिंग

Q.34)- साहित्य, विज्ञान, कला या समाजसेवा में विशेष ज्ञान या व्यावहारिक अनुभव रखने वाले कुल कितने व्यक्तियों को राष्ट्रपति द्वारा राज्यसभा के सदस्य के रूप में नामित किया जा सकता है?

1. पंद्रह 2. दस 3. बारह 4. तीन

Q.35)- ऐतिहासिक सोमनाथ मंदिर, जिसे प्राचीन समय में विदेशी आक्रमणकारियों द्वारा कई बार लूटा गया था, निम्न में से किस राज्य में स्थित है?

1. पंजाब 2. गुजरात 3. हरियाणा 4. महाराष्ट्र

Q.36)- भोपाल गैस त्रासदी में जान गंवाने वाले लोगों की याद में प्रतिवर्ष _____ को राष्ट्रीय प्रदूषण नियंत्रण दिवस मनाया जाता है।

1. 2 दिसंबर 2. 15 जुलाई 3. 6 नवंबर 4. 23 अक्टूबर

Q.37)- निम्न में से किस राज्य में भारत का पहला मॉस गार्डन (moss garden) विकसित किया जा रहा है?

1. असम 2. उत्तराखंड 3. मिजोरम 4. हिमाचल प्रदेश

Q.38)- निकिल और कोबाल्ट नामक तत्वों को उनके चुंबकीय गुणों के संदर्भ में, _____ के रूप में वर्गीकृत किया गया है।

1. प्रतिचुंबकीय (diamagnetic)
2. लौहचुंबकीय (ferromagnetic)
3. प्रतिलौहचुंबकीय (anti-ferromagnetic)
4. अनुचुंबकीय (paramagnetic)

Q.39)- बैसाखी निम्न में से किस राज्य/केंद्र शासित प्रदेश का प्रसिद्ध त्योहार है?

1. बिहार 2. जम्मू और कश्मीर 3. पंजाब 4. अंडमान और निकोबार

Q.40)- वित्तीय वर्ष 2018-19 में, ऑल इंडिया नॉमिनल जीडीपी में किस भारतीय राज्य का सबसे अधिक योगदान रहा था?

1. कर्नाटक 2. महाराष्ट्र 3. गुजरात 4. केरल

Q.41)- फरवरी 2020 में आयोजित 70वें बर्लिन अंतरराष्ट्रीय फिल्म महोत्सव में निम्न में से किस फिल्म को 'गोल्डन बियर फॉर बेस्ट फिल्म' का पुरस्कार दिया गया था?

1. द वूमन हू रन (The Woman Who Ran)
2. ए मैन ऑफ़ इंटीग्रिटी (A Man of Integrity)
3. मनुस्क्रिप्ट्स डॉट बर्न (Manuscripts Don't Burn)
4. देअर इज़ नो ईविल (There Is No Evil)

Q.42)- निम्न में से कौन-सा विकल्प टेस्ला नामक SI व्युत्पन्न इकाई में मापा जाता है?

1. प्रदीप्ति घनत्व (Illuminance)
2. धारिता (Capacitance) 3. चुंबकीय अभिवाह घनत्व (Magnetic flux density)
4. दीप्त अभिवाह (Luminous flux)

Q.43)- निम्न में से किसने 'द निकिल बॉयज़ (The Nickel Boys)' नामक अपनी पुस्तक के लिए 2020 का पुलित्जर पुरस्कार जीता था?

1. ब्रायन एम. रोसेंथल 2. डब्ल्यू. कालेब मैकडैनियल
3. माइकल आर. जैक्सन 4. कोलसन व्हाइटहेड

Q.44)- महारानी विक्टोरिया उद्धोषणा ने कब स्पष्ट किया कि भारत एक राज्य सचिव के माध्यम से ब्रिटिश सम्राट (British Monarch) के नाम पर शासित होगा?

1. 23 जुलाई 1878 2. 16 जनवरी 1789 3. 01 नवंबर 1858 4. 12 जून 1875

Q.45)- सिंधु नदी की सबसे बड़ी सहायक नदी कौन-सी है?

1. रावी 2. चिनाब 3. सतलुज 4. ब्यास

Q.46)- मार्च 2020 में निम्न में से कौन-से फुटबॉल क्लब ने इंडियन सुपर लीग में जीत प्राप्त की?

1. बेंगलुरु FC 2. FC गोवा 3. ATK FC 4. चेन्नइयन FC

Q.47)- स्वतंत्रता के बाद भारत में कितनी स्वतंत्र रियासतें एकीकृत की गई थीं?

1. 545 2. 562 3. 575 4. 535

Q.48)- संविधान द्वारा, राष्ट्रपति को उन सिद्धांतों पर सिफारिश करने के लिए निम्न में से किस संस्थान को अनिवार्य रूप से अधिकृत किया गया है, जो भारत के समेकित कोष से राज्यों के राजस्व के सहायता अनुदान का नियमन करते हैं?

1. व्यय विभाग 2. वित्त आयोग 3. विधि आयोग 4. भारतीय रिजर्व बैंक

Q.49)- भारतीय कॉफी बोर्ड के अनुसार, 2020 में भारत का कौन-सा राज्य कॉफी का सबसे बड़ा उत्पादक था?

1. कर्नाटक 2. असम 3. तमिलनाडु 4. गोवा

Q.50)- प्राणी जगत में निम्न में से किस सदस्य के हृदय में चार कक्ष होते हैं?

1. मत्स्य 2. सरीसृप (मगरमच्छ को छोड़कर)
3. उभयचर 4. पक्षी

English Language and Comprehension

Q.1)- Select the correct active voice of the given sentence.

Shouldn't the brave frontline warriors be honoured by us for their exemplary service?

1. Shouldn't we have honoured the brave frontline warriors for their exemplary service?
2. Shouldn't we honour the brave frontline warriors for their exemplary service?
3. Shouldn't we have been honouring the brave frontline warriors for their exemplary service?
4. Shouldn't we be honouring the brave frontline warriors for their exemplary service?

Q.2)- Select the most appropriate synonym of the given word.

TIMID

1. courageous 2. humble 3. confident 4. bold

Q.3)- There is an underlined segment in the given sentence. Select the most appropriate option to substitute the segment. If there is no need to substitute it, select 'No substitution required'.

I like Rahane's style of batting more than Kohli.

1. more from Kohli's 2. No substitution required
3. more from Kohli 4. more than Kohli's

Q.4)- Fill in the blank with the most appropriate word.

The mid-day meal ensures _____ each child studying in a government school has at least one nutritious meal a day.

1. this 2. these 3. those 4. that

Q.5)- Select the correct passive voice of the given sentence.

Ruma plays carrom very well.

1. Carrom is playing very well by Ruma.
2. Carrom was played very well by Ruma.
3. Carrom has been played very well by Ruma.
4. Carrom is played very well by Ruma.

Q.6)- Select the most appropriate ANTONYM of the given word.

HARMONY

1. creativity
2. understanding
3. discord
4. friendship

Q.7)- In the given sentence, identify the segment that contains a grammatical error.

Discuss how will you keep your surroundings clean and hygienic.

1. will you keep
2. clean and hygienic
3. your surroundings
4. Discuss how

Q.8)- Select the correct indirect form of the given sentence.

I said to Taru, "Be careful when you go out."

1. I said to Taru be careful when you go out.
2. I told Taru to be careful when I went out.
3. I told Taru to be careful when she went out.
4. I told Taru be careful when she goes out.

Q.9)- Select the most appropriate meaning of the given idiom.

Dry run

1. Rehearsal of an event
2. Running without shoes
3. Running in a desert
4. Jogging in a park

Q.10)- Identify the segment in the sentence which contains a grammatical error.

The officer made me to type the letter again.

1. made me
2. The officer
3. to type
4. the letter again

Q.11)- Select the most appropriate option to improve the underlined segment in the given sentence. If there is no need to improve it, select 'No improvement required'.

You might spot a tiger in the Sariska reserve if you would be lucky.

1. if you are
2. No improvement required
3. then you are
4. if it was

Q.12)- Select the most appropriate option to substitute the underlined segment in the given sentence. If there is no need to substitute it, select 'No substitution'.

Her coach allowed she swimming in deep water.

1. her to swim
2. No substitution
3. her swimming
4. she to swim

Q.13)- Select the most appropriate synonym of the given word.

Deficient

1. Bold
2. Challenging
3. Difficult
4. Lacking

Q.14)- Select the option that expresses the given sentence in passive voice.

When did they find the mistake?

1. When is the mistake found?
2. When has the mistake been found?
3. When was the mistake found?
4. When was the mistake founded?

Q.15)- Select the option that expresses the given sentence in passive voice.

The jury has given the final verdict.

1. The final verdict has been given by the jury.
2. The final verdict was given by the jury.
3. The final verdict is given by the jury.
4. The final verdict is being given by the jury.

Q.16)- Given here are four sentences. The first sentence is in correct order, while the rest of the sentences are jumbled. Pick the option that gives their correct order.

A. There are two ways of getting rid of weeds in your garden – the easy way and the not-so-easy way.

B. The easy way may be to run a lawn-mower and the lawn looks fine for a while.

C. It is time consuming and painful, but the weeds will stay away for a longer time.

D. But the not-so-easy way may mean getting down on your knees and pulling out the weeds by the roots.

1. ABDC
2. ACDB
3. ABCD
4. ADBC

Q.17)- Select the correct indirect narration of the given sentence.

Savita said, "I'm enjoying my stay in the hills."

1. Savita said that I'm going to enjoy my stay in the hills.
2. Savita said that I am enjoying my stay in the hills.
3. Savita said that she was enjoying her stay in the hills.
4. Savita said that she had been enjoying her stay in the hills.

Q.18)- In the given sentence, identify the segment which contains a grammatical error.

I would like you to listen careful to what I am saying.

1. to what
2. to listen careful
3. am saying
4. would like

Q.19)- Identify the segment in the sentence which contains a grammatical error.

This is one of the best books that has been published this year.

1. This is
2. this year
3. that has been published
4. one of the best books

Q.20)- Fill in the blank with the most appropriate word.

She is eagerly waiting for the day when she _____ to her fiancé.

1. has married
2. got marry
3. will marries
4. gets married

Q.21)- Select the most appropriate ANTONYM of the given word.

APPRISE

1. inform
2. enlighten
3. hide
4. notify

Q.22)- Select the correct passive form of the given sentence.

The family was watching Ramayana on the TV.

1. Ramayana was watching the family on the TV.
2. Ramayana is being watched by the family on the TV.
3. Ramayana was being watched by the family on the TV.
4. Ramayana has been watched by the family on the TV.

Q.23)- Select the most appropriate option to improve the underlined segment in the given sentence. If there is no need to improve it, select 'No improvement required'.

Sonali as well as her brother is performing at the show tonight.

1. No improvement required
2. have performance
3. were performing
4. are performing

Q.24)- Select the option that expresses the given sentence in direct speech.

He advised his friend to lose some weight.

1. He told his friend, "You should lose some weight."
2. He told to his friend, "Please lose some weight."
3. He told to his friend, "You must lose some weight."
4. He told his friend, "I may lose some weight."

Q.25)- Select the correct direct narration of the given sentence.

The group leader told Sara that she had been talking nonstop for over three minutes.

1. The group leader asked Sara, "You had been talking for three minutes nonstop."
2. The group leader told Sara, "She had been talking nonstop for over three minutes."
3. The group leader said to Sara, "You have been talking nonstop for over three minutes."
4. The leader said to Sara, "You are talking nonstop for over three minutes."

Q.26)- Select the most appropriate ANTONYM of the given word.

Jubilant

1. Depressed
2. Happy
3. Delighted
4. Young

Q.27)- Given here are four sentences. The first sentence is in correct order, while the rest of the sentences are jumbled. Pick the option that gives their correct order.

- A. At last I reached my uncle's beach house.
- B. I was determined to enjoy my stay thoroughly.
- C. But, somehow, I had forgotten to pack any sunscreen.
- D. So, I had packed everything I might need.

1. ABDC 2. ACDB 3. ACBD 4. ADBC

Q.28)- The following sentence has been split into four segments. Identify the segment that contains a grammatical error.

I think your watch / goes ten minutes behind; / mine shows / the correct time.

1. mine shows 2. the correct time 3. I think your watch 4. goes ten minutes behind

Q.29)- Select the most appropriate option to substitute the underlined segment in the given sentence. If no substitution is required, select 'No substitution'.

Practising math sums in so many periods over time is better than in long periods at a time, for effective learning.

1. much 2. too much 3. short 4. No substitution

Q.30)- The following sentence has been split into four segments. Identify the segment that contains a grammatical error.

Many of my friends / spoke highly / of a film / which I have seen it yesterday.

1. Many of my friends 2. spoke highly 3. which I have seen it yesterday
4. of a film

Q.31)- Select the option that expresses the given sentence in active voice.

This fact has not been brought to my notice by anybody.

1. Anybody has not brought this fact to my notice.
2. My notice has not been brought to this fact.
3. Nobody has brought this fact to my notice.
4. Nobody brought this fact to my notice.

Q.32)- Select the most appropriate option to substitute the underlined segment in the given sentence. If no substitution is required, select 'No substitution'.

Does this plant be kept indoors?

1. Did 2. No substitution 3. Can 4. Do

Q.33)- Select the most appropriate meaning of the given idiom.

At a snail's pace

1. rapidly 2. carelessly 3. peacefully 4. very slowly

Q.34)- Select the most appropriate synonym of the given word.

TRANQUIL

1. Ill-tempered 2. nervous 3. sober 4. worried

Q.35)- Identify the segment in the sentence which contains a grammatical error.

Neither the reporters nor the editor were satisfied by the attitudes of the publishers of the newspaper.

1. of the publishers
2. Neither the reporters
3. by the attitudes
4. were satisfied

Q.36)- Select the most appropriate option to improve the underlined segment in the given sentence. If there is no need to improve it, select 'No improvement required'.

Whoever performs exceptionally well he will be promoted immediately.

1. will be
2. he would be
3. No improvement required
4. he should be

Q.37)- Select the most appropriate synonym of the given word.

Stationary

1. Fixed
2. Paper
3. Movable
4. Portable

Q.38)- Select the correct direct narration of the given sentence.

I stepped forward and asked the store keeper how much the mangoes cost.

1. He stepped forward and said to the store keeper, "How much does the mangoes cost?"
2. I stepped forward and said to the store keeper, "How much do the mangoes cost?"
3. I stepped forward and told to the store keeper, "How much are the mangoes costing?"
4. I stepped forward and said to the store keeper, "How much did the mangoes cost?"

Q.39)- Select the most appropriate ANTONYM of the given word.

PREVAIL

1. prove
2. surrender
3. succeed
4. control

Q.40)- Select the correct indirect form of the given sentence.

Anna said, "What are you talking about, Mark? How can you leave us alone at such a difficult time?"

1. Anna was surprised and asked Mark what he was talking about. She further asked him how he could leave them alone at such a difficult time.
2. Anna asked Mark what he is talking about. She further asked him how could he leave them alone at such a difficult time.
3. Anna was in surprise and asking Mark what he was talking about. She was asking him how he could leave them alone at such a difficult time.
4. Anna was surprised and asking Mark what was he talking about. She also asked him how he can leave them alone at such a difficult time.

Q.41)- Select the correct active voice of the given sentence.

Online summer camps in different sports have been arranged for students by the education ministry.

1. By the education ministry in different sports online summer camps have been arranged for students.
2. The education ministry is arranging online summer camps in different sports for students.
3. The education ministry has arranged online summer camps in different sports for students.
4. Online summer camps in different sports are going to be arranged by the education ministry for

students

Q.42)- Select the most appropriate ANTONYM of the given word.

Feeble

1. Soft
2. Frail
3. Weak
4. Strong

Q.43)- Select the correct active form of the given sentence.

Unskilled workers are being replaced by trained people in this factory.

1. Trained people are replacing unskilled workers in this factory.
2. Trained people have replaced unskilled workers in this factory.
3. Unskilled workers are replacing trained people in this factory.
4. Trained people were replacing unskilled workers in this factory.

Q.44)- Select the option that expresses the given sentence in reported speech.

I said, "I took a lot of precautions after my surgery."

1. I said that I will take a lot of precautions after my surgery.
2. I said that I took a lot of precautions after my surgery.
3. I said that I had taken a lot of precautions after my surgery.
4. I said that I have taken a lot of precautions after my surgery.

Q.45)- Select the correct passive form of the given sentence.

The country is witnessing a severe locust outbreak in Rajasthan and Gujarat.

1. A severe locust outbreak in the country is being witnessed by Rajasthan and Gujarat.
2. A severe locust outbreak in Rajasthan and Gujarat is being witnessed by the country.
3. A severe locust outbreak in Rajasthan and Gujarat is witnessing the country.
4. A severe locust outbreak in Rajasthan and Gujarat has been witnessed by the country.

Q.46)- Given here are four sentences. The first sentence is in correct order, while the rest of the sentences are jumbled. Pick the option that gives their correct order.

- A. We make a lot of choices in our daily life.
- B. Living on the edge may be exciting but not always the right thing to do.
- C. These determine either our safety or put us in danger.
- D. Therefore, following limits is always the safer and better way of life.

1. ABDC
2. ACBD
3. ABCD
4. ADBC

Q.47)- Select the most appropriate option to substitute the underlined segment in the given sentence. If no substitution is required, select 'No substitution'.

You must be quite good acquainted with the terrain in this jungle.

1. best acquaint
2. better acquaints
3. No substitution
4. well acquainted

Q.48)- Select the most appropriate option to substitute the underlined segment in the given sentence. If no substitution is required, select 'No substitution'.

By withhold the officer's promotion, the department caused her a great deal of frustration.

1. To withholding
2. No substitution
3. In withhold
4. By withholding

Q.49)- Select the correct active voice of the given sentence.

Weren't you informed about the new policies of hiring?

1. Was anyone informing you about the new policies of hiring?
2. Wasn't anyone informing you about the new policies of hiring?
3. Didn't anyone inform you about the new policies of hiring?
4. Hadn't anyone informed you about the new policies of hiring?

Q.50)- Select the option that expresses the given sentence in direct speech.

Madam Hooch asked the students what they were waiting for.

1. Madam Hooch said to the students, "What you are waiting for?"
2. Madam Hooch said to the students, "What are you waiting for?"
3. Madam Hooch told the students, "What they were waiting for?"
4. The students said to Madam Hooch, "What are we waiting for?"

Q.51)- Select the most appropriate meaning of the given idiom.

To call the shots

1. To shoot someone
2. To take pictures
3. To have control
4. To call someone

Q.52)- Select the most appropriate option to substitute the underlined segment in the given sentence. If there is no need to substitute it, select 'No substitution'.

The situation in the city is now fully under control.

1. beneath
2. below
3. beside
4. No substitution

Q.53)- Given below are four jumbled sentences. Out of the given options, pick the one that gives their correct order.

- A. Susan Reynolds slipped into her car after putting her shopping bags in the trunk.
- B. She reached her house and carried the shopping bags in.
- C. It was a thirty-minute ride to her home and the traffic was light.
- D. She put them down and turned off the alarm.

1. ABDC
2. ADCB
3. ABCD
4. ACBD

Q.54)- The following sentence has been split into four segments. Identify the segment that contains a grammatical error.

After a long trek / through the forest, / we arrived to the camp / around 8 p.m.

1. through the forest
2. we arrived to the camp
3. After a long trek
4. around 8 p.m.

Q.55)- Given here are four sentences. The first sentence is in correct order, while the rest of the sentences are jumbled. Pick the option that gives their correct order.

- A. The computer company was in a crisis as its sales and profits were falling.
- B. He immediately set to work chopping jobs and taking other tough decisions.
- C. Soon things started changing and the company was saved, at least in the short term.
- D. The board brought in a new CEO with many years of experience who began managing the crisis.

1. ADCB 2. ABCD 3. ADBC 4. ACBD

Q.56)- Identify the segment in the sentence which contains a grammatical error.

The house when I was born is in ruins.

1. The house 2. was born 3. when I 4. is in ruins

Q.57)- Select the most appropriate option to fill in the blank.

The evidence in the murder case _____ presented before the jury.

1. had 2. were 3. was 4. has

Q.58)- In the sentence identify the segment that contains a grammatical error.

Have you decided which university you want to join after you finished school?

1. after you finished 2. Have you decided 3. which university 4. you want to join

Q.59)- Select the correct direct form of the given sentence.

Anju told her brother that she was going to bake a cake for him that day.

- 1. Anju said to her brother, "She is going to bake a cake for you today."
- 2. Anju said to her brother, "I am going to bake a cake for him tomorrow."
- 3. Anju said to her brother, "She was going to bake a cake for him today."
- 4. Anju said to her brother, "I am going to bake a cake for you today."

Q.60)- Select the most appropriate meaning of the given idiom.

Twist someone's arm

- 1. hurt someone by mistake
- 2. persuade someone to do something
- 3. handle a situation cleverly
- 4. understand a problematic situation

Q.61)- Select the most appropriate synonym of the given word.

HOSPITABLE

1. hostile 2. congenial 3. unsocial 4. stingy

Q.62)- Select the most appropriate meaning of the given idiom.

Once and for all

1. Effectively 2. Finally 3. Happily 4. Out of control

Q.63)- Select the most appropriate option to fill in the blank.

He fell _____ the swing in the garden.

1. below 2. off 3. away 4. along

Q.64)- Select the most appropriate option to fill in the blank.

There _____ considerable room for improvement in your drawing.

1. is 2. be 3. were 4. are

Q.65)- Select the option that expresses the given sentence in reported speech.

“What a wonderful ride it was!” said Madhav.

1. Madhav asked was it a wonderful ride.
2. Madhav exclaimed that what a wonderful ride was it.
3. Madhav exclaimed that what a wonderful ride it was.
4. Madhav exclaimed that it was a wonderful ride.

In the following passage, some words have been deleted. Fill in the blanks with the help of the options given. Select the most appropriate option for each number.

The Covid-19 pandemic has deeply affected people across the world. During these difficult (1)_____ frontline workers have been at the highest risk as (2)_____ have been stepping out to work daily (3)_____ proper protective gear. An NGO reached out to people to (4)_____ funds to procure PPE kits, masks and sanitizers for (5)_____ among the frontline workers. Several school children participated (6)_____ this noble initiative. They collected old newspapers and books and (7)_____ them to raise a good sum of money which was (8)_____ used to buy kits. The children were happy to (9)_____ and learnt how taking care of each other is very (10)_____ in such challenging situations.

Q.66)- Select the most appropriate option to fill in blank no. 1.

1. timings 2. time 3. timing 4. times

Q.67)- Select the most appropriate option to fill in blank no. 2.

1. they 2. she 3. we 4. he

Q.68)- Select the most appropriate option to fill in blank no. 3.

1. with 2. after 3. beyond 4. without

Q.69)- Select the most appropriate option to fill in blank no. 4.

1. raising 2. rising 3. raise 4. rise

Q.70)- Select the most appropriate option to fill in blank no. 5.

1. distribution 2. allotment 3. diffusion 4. spreading

Q.71)- Select the most appropriate option to fill in blank no. 6.

1. along 2. beside 3. through 4. in

Q.72)- Select the most appropriate option to fill in blank no. 7.

1. funded 2. sold 3. purchased 4. donated

Q.73)- Select the most appropriate option to fill in blank no. 8.

1. exactly 2. aptly 3. timely 4. equally

Q.74)- Select the most appropriate option to fill in blank no. 9.

1. contribute 2. afford 3. devote 4. enrich

Q.75)- Select the most appropriate option to fill in blank no. 10.

1. serious 2. important 3. large 4. urgent

In the following passage some words have been deleted. Fill in the blanks with the help of the alternatives given. Select the most appropriate option for each blank.

In 1945, James Leach Miller returned from World War II and shared nothing (1)_____ it with his wife. He folded up his Army (2)_____, with the medals still pinned to it, and (3)_____ put it in the basement, where his older boy would (4)_____ take it out to play soldiers. He never complained (5)_____ that generation of army men didn't air their problems. His son Michael once offered to take him back to Normandy when World War II veterans (6)_____ the journey but his father shook (7)_____ head saying, "I've been there once." Sadly, Mr. Miller, 96 years old, (8)_____ survived the bloodiest battle of World War II, died of (9)_____ from the coronavirus on March 30 (10)_____ an Old Soldiers' Home.

Q.76)- Select the most appropriate option to fill in blank 1.

1. about 2. for 3. within 4. to

Q.77)- Select the most appropriate option to fill in blank 2.

1. uniformity 2. uniformly 3. uniforms 4. uniform

Q.78)- Select the most appropriate option to fill in blank 3.

1. carefully 2. hopefully 3. strongly 4. truly

Q.79)- Select the most appropriate option to fill in blank 4.

1. no time 2. any time 3. sometimes 4. all times

Q.80)- Select the most appropriate option to fill in blank 5.

1. if 2. because 3. however 4. nevertheless

Q.81)- Select the most appropriate option to fill in blank 6.

1. had made 2. was making 3. are made 4. were making

Q.82)- Select the most appropriate option to fill in blank 7.

1. his
2. their
3. one's
4. theirs

Q.83)- Select the most appropriate option to fill in blank 8.

1. whose
2. which
3. who
4. whom

Q.84)- Select the most appropriate option to fill in blank 9.

1. complicating
2. complicated
3. complicates
4. complications

Q.85)- Select the most appropriate option to fill in blank 10.

1. between
2. inside
3. among
4. into

Read the given passage and answer the questions that follow.

I was a chef in the Taj banquet kitchen when the gunshots started that night. Initially, the news was that it was an internal gang war in a neighbourhood nearby and that it would die down soon. It was only at about 10.30 or 11 p.m. that we understood the magnitude of what was going on. We were seven chefs in the kitchen that night, not one of whom left the Taj despite knowing all exit points. By then the shootout had happened at the Wasabi restaurant and all those who had survived were pouring into the banquet hall and kitchen where we were working.

As soon as we had heard about the shootout, we had prepared sandwiches for our surviving guests which we then handed out. After this, we entered the corridor to escort our guests out of the hotel through the back entrance. We had successfully helped a few guests when I saw the left profile of a terrorist in a red cap, who began shooting. I was standing next to a refrigerator, when my head chef and his assistant chef both got shot. There was chaos, panic and fear as our guests started running everywhere – but by then they had opened fire in all directions.

All of a sudden, everything went quiet and that silence was the worst. I tried looking around for survivors, but it was just me. I stayed there for a few hours, until I realised that no help would be coming anytime soon. I looked at the refrigerator where I'd been only a while ago and it had 3 bullet holes in it – I'd narrowly escaped death, but it was horrifying to see that my guests and colleagues hadn't been as lucky. I won't look back on that day as just a terrorist attack, but a day when many brave individuals looked death in the eye to help others.

Q.86)- On the day of the shootout:

1. the brave ones faced death to help those in need
2. all chefs left through the exit points
3. many of the staff behaved like cowards
4. all of those who were present in the hotel died

Q.87)- Which of the following did the hotel staff do?

- a) Served snacks to the guests
- b) Escorted guests out of the hotel

- c) Escorted guests to their rooms
- d) Looked around for survivors
- e) Ran here and there in fear and panic
- f) Ran out of the hotel to save themselves

1. c, e and f 2. a, c and e 3. a, b and d 4. b, d and f

Q.88)- 'All of a sudden, everything went quiet and that silence was the worst.' The narrator felt so because:

- 1. it indicated everyone had run away
- 2. the narrator was alone to manage the kitchen
- 3. the narrator was afraid of dying
- 4. it appeared as if everyone around had been shot

Q.89)- The shootout first started in:

- 1. Wasabi restaurant 2. the corridor near the exit
- 3. the kitchen 4. the banquet hall

Q.90)- By saying that many 'looked death in the eye' the narrator means they:

- 1. were very disturbed 2. thought death to be the last option
- 3. showed fear of dying 4. faced death bravely

Read the following passage and answer the questions given that follow.

An excavation of ancient Babylon revealed evidence that Babylonians were making soap around 2800 B.C. This is the first concrete evidence we have of soap-like substance. The early soap makers were Babylonians, Mesopotamians, Egyptians, as well as the ancient Greeks and Romans. All of them made soap by mixing fat, oils and salts. Soap wasn't made and used for bathing and personal hygiene but was rather produced for cleaning cooking utensils or goods or was used for medicine purposes. The early references to soap making were for the use of soap in cleaning wool and cotton used in textile manufacture and was used medicinally for at least 5000 years.

Soap is a product for cleaning made from natural ingredients that may include both plant and animal products, including items as: animal fat, such as tallow or vegetable oil, such as castor, olive, or coconut oil. Soap supposedly got its name from Mount Sapo in Rome. The word 'sapo', Latin for soap, first appeared in Pliny the Elder's *Historia Naturalis*. The first soap was made by Babylonians around 2800 B.C.

Soap making history goes back many thousands years. In the early beginnings of soap making, it was an exclusive technique used by small groups of soap makers. The demand for soap was high, but it was very expensive and there was a monopoly on soap production in many areas. Back then, plant byproducts and animal and vegetable oils were the main ingredients of soap. The price of soap was significantly reduced in 1791 when a Frenchman by the name of LeBlanc discovered a chemical process that allowed soap to be made cheaply and sold for significantly less money.

More than 20 years later, another Frenchman identified relationships between glycerin, fats and acid – what marked the beginning of modern soap making. With this discovery of another method of making soap, soap became even less expensive. Since that time, there have been no major discoveries and the same processes are

used for the soap making we use and enjoy today.

Advances came as the science of chemistry developed because more was understood about the ingredients. In the mid-nineteenth century, soap for bathing became a separate commodity from laundry soap, with milder soaps being packaged, sold and made available for personal use. Liquid hand soaps were invented in the 1970s and this invention keeps soaps in the public view.

Today, there are many different kinds of soaps made for a vast array of purposes. Soap is available for personal, commercial and industrial use. There is handmade, homemade and commercially produced soap, there is soap used to wash clothes, dishes and cars, there is soap used for your pet, soap for your carpet and also soap for your child.

Q.91)- Soap became less expensive in the early 19th century because:

1. a chemical process of soap making had been discovered
2. the ingredients of soap had become cheaper
3. the monopoly on soap making was curtailed
4. soap was manufactured by small groups of soap makers

Q.92)- After reading the passage it can be inferred that soap was first made by:

1. Mesopotamians
2. Egyptians
3. Babylonians
4. Romans

Q.93)- In early days, soap was NOT used for:

1. washing cooking utensils
2. medicine and in textile manufacturing.
3. bathing and personal hygiene
4. cleaning different goods

Q.94)- The main theme of the passage is:

1. the ingredients of soap
2. the invention of soap
3. the kinds of soap
4. the history of soap

Q.95)- Till the eighteenth century, which ingredient was NOT used in making soap?

1. Glycerin
2. Animal fat
3. Vegetable oils
4. Plant byproducts

Read the given passage and answer the questions that follow.

I was on a visit to Calcutta. It was Saturday and I was staying for the weekend at my cousin's. That evening my cousin, who works in a firm, had to fly to Delhi for a meeting. So, his wife drove him to the airport and I accompanied them. On our way back from the airport we stopped by a lake. My cousin's wife said, "Let me show you where we spend some of our evenings." She locked the car and we began to walk towards the lake. There was a small bridge to cross and she led the way. Three young men were coming from the other end of the bridge. As they approached us, one of them said to me, "Can I have a match?" As I put my hand into my pocket for the match box, I heard a cry of alarm. And then I saw what was happening.

One of the other two men had snatched the handbag from my cousin's wife and passed it on the man next to

him. He in turn passed it to the third man and all three started running back to where they had come from. My cousin's wife kept shouting and hurling abuses at them but made no attempt to follow them to retrieve her bag. I wanted to chase them but she stopped me saying that such rogues could be armed and dangerous. As it was dark, the three men were soon out of sight. I felt sorry for not being of any help but my cousin's wife assured me that there was no money or valuables in the bag. She had just kept a couple of apples and a packet of biscuits in the handbag in case I felt hungry.

Q.96)- One of the three men asked the narrator for a match to:

1. pass the bag to his accomplice
2. smoke a cigarette
3. burn the handbag
4. stop and divert the narrator's attention

Q.97)- Which of the following statements is NOT true?

1. The handbag contained apples and biscuits.
2. The narrator's cousin lived in Calcutta.
3. The narrator drove his cousin to the airport.
4. There was no real loss in the incident.

Q.98)- After dropping the narrator's cousin, his cousin's wife took him to a lake to:

1. have a picnic by the lakeside
2. have an evening walk on the bridge
3. show him the place where she and her husband spent their evenings
4. enjoy the cool breeze in the evening

Q.99)- Why did the narrator's cousin's wife stop him from chasing the thieves?

1. She feared they could harm the narrator.
2. He couldn't follow them in the dark.
3. She wanted to retrieve the bag herself.
4. There were no valuables in the handbag.

Q.100)- How long was the narrator going to stay at his cousin's place?

1. One week
 2. One day
 3. Two weeks
 4. Two days
-

General Intelligence and Reasoning

Q.1	4	Q.2	4	Q.3	2	Q.4	4	Q.5	1
Q.6	3	Q.7	3	Q.8	1	Q.9	4	Q.10	1
Q.11	1	Q.12	4	Q.13	3	Q.14	3	Q.15	2
Q.16	2	Q.17	3	Q.18	2	Q.19	1	Q.20	3
Q.21	3	Q.22	3	Q.23	1	Q.24	4	Q.25	4
Q.26	4	Q.27	3	Q.28	1	Q.29	2	Q.30	3
Q.31	1	Q.32	3	Q.33	4	Q.34	2	Q.35	4
Q.36	2	Q.37	4	Q.38	4	Q.39	4	Q.40	2
Q.41	2	Q.42	4	Q.43	2	Q.44	3	Q.45	2
Q.46	3	Q.47	1	Q.48	2	Q.49	1	Q.50	3

General Awareness

Q.1	2	Q.2	2	Q.3	4	Q.4	2	Q.5	3
Q.6	4	Q.7	3	Q.8	4	Q.9	1	Q.10	4
Q.11	1	Q.12	3	Q.13	4	Q.14	3	Q.15	4
Q.16	1	Q.17	1	Q.18	3	Q.19	2	Q.20	2
Q.21	2	Q.22	3	Q.23	1	Q.24	2	Q.25	3
Q.26	3	Q.27	3	Q.28	1	Q.29	4	Q.30	2
Q.31	2	Q.32	3	Q.33	3	Q.34	3	Q.35	2
Q.36	1	Q.37	2	Q.38	2	Q.39	3	Q.40	2
Q.41	4	Q.42	3	Q.43	4	Q.44	3	Q.45	2
Q.46	3	Q.47	2	Q.48	2	Q.49	1	Q.50	4

English Language and Comprehension

Q.1	2	Q.2	2	Q.3	4	Q.4	4	Q.5	4
Q.6	3	Q.7	1	Q.8	3	Q.9	1	Q.10	3
Q.11	1	Q.12	1	Q.13	4	Q.14	3	Q.15	1
Q.16	1	Q.17	3	Q.18	2	Q.19	3	Q.20	4
Q.21	3	Q.22	3	Q.23	1	Q.24	1	Q.25	3
Q.26	1	Q.27	1	Q.28	4	Q.29	3	Q.30	3
Q.31	3	Q.32	3	Q.33	4	Q.34	3	Q.35	3
Q.36	1	Q.37	1	Q.38	2	Q.39	2	Q.40	1
Q.41	3	Q.42	4	Q.43	1	Q.44	3	Q.45	2
Q.46	2	Q.47	4	Q.48	4	Q.49	3	Q.50	2
Q.51	3	Q.52	4	Q.53	4	Q.54	2	Q.55	3
Q.56	3	Q.57	3	Q.58	1	Q.59	4	Q.60	2
Q.61	2	Q.62	2	Q.63	2	Q.64	1	Q.65	4
Q.66	4	Q.67	1	Q.68	4	Q.69	3	Q.70	1
Q.71	4	Q.72	2	Q.73	2	Q.74	1	Q.75	2
Q.76	1	Q.77	4	Q.78	1	Q.79	3	Q.80	2
Q.81	4	Q.82	1	Q.83	3	Q.84	4	Q.85	2
Q.86	1	Q.87	3	Q.88	4	Q.89	1	Q.90	4
Q.91	1	Q.92	3	Q.93	3	Q.94	4	Q.95	1
Q.96	4	Q.97	3	Q.98	3	Q.99	1	Q.100	4