

SSC
Stenographer 2020
Previous Year Paper
(11 Nov 2021 Shift 1)
Hindi

Adda247

Adda247

Test Prime

ALL EXAMS, ONE SUBSCRIPTION



1,00,000+
Mock Tests



Personalised
Report Card



Unlimited
Re-Attempt



600+
Exam Covered



25,000+ Previous
Year Papers



500%
Refund



ATTEMPT FREE MOCK NOW

Stenographer Grade C and D Examination 2020

Roll Number	
Candidate Name	
Venue Name	Dewa Mahila Mahavidyalaya
Exam Date	11/11/2021
Exam Time	9:00 AM - 11:00 AM
Subject	Stenographer 2020

Section : General Intelligence and Reasoning

Q.1 किसी कूट भाषा में, 'he is waiting' को '269' लिखा जाता है, 'she is ready' को '915' लिखा जाता है और 'he and she' को '271' लिखा जाता है। तो उसी कूट भाषा में 'and' को किस प्रकार लिखा जाएगा?

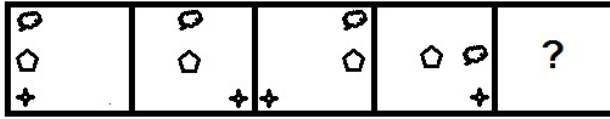
- Ans
- 1.9
 - 2.7
 - 3.2
 - 4.1

Question ID : 81616110755

Status : Answered

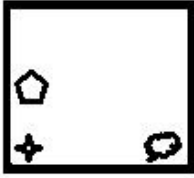
Chosen Option : 2

Q.2 उस आकृति का चयन करें, जो निम्न आकृति श्रेणी में प्रश्नवाचक चिह्न (?) के स्थान पर होगी।




Ans


✓ 1.




✗ 2.



✗ 3.



✗ 4.



Question ID : 81616110788

Status : Answered

Chosen Option : 3

Q.3 तीन कथनों के बाद तीन निष्कर्ष I, II और III दिए गए हैं। यह मानते हुए कि कथन सत्य हैं, भले ही ये सामान्य रूप से ज्ञात तथ्यों से भिन्न प्रतीत होते हों, निर्धारित करें कि कौन-सा/से निष्कर्ष कथनों का तार्किक रूप से अनुसरण करता/करते है/हैं।

कथन:

सभी कक्षाएं, विद्यालय हैं।
कोई भी विद्यालय, पार्क नहीं है।
सभी घर, पार्क हैं।

निष्कर्ष:

I. कोई भी घर, कक्षा नहीं है।
II. कोई भी पार्क, कक्षा नहीं है।
III. कोई भी विद्यालय, घर नहीं है।

Ans ✗ 1. केवल निष्कर्ष III अनुसरण करता है

✓ 2. सभी निष्कर्ष अनुसरण करते हैं

✗ 3. केवल निष्कर्ष II अनुसरण करता है

✗ 4. केवल निष्कर्ष I अनुसरण करता है

Question ID : 81616110768

Status : Answered

Chosen Option : 4

Q.4 दिए गए विकल्पों में से उस संख्या का चयन करें, जो निम्न श्रृंखला में प्रश्नवाचक चिह्न (?) के स्थान पर आ सकती है।

1, 2, 4, 4, 9, 6, ?, 8, 25, 10

- Ans
- 1. 11
 - 2. 9
 - 3. 16
 - 4. 8

Question ID : 8161611386

Status : Answered

Chosen Option : 4

Q.5 उस विकल्प का चयन करें, जो तीसरे अक्षर-समूह से ठीक उसी प्रकार संबंधित है, जिस प्रकार दूसरा अक्षर-समूह पहले अक्षर-समूह से संबंधित है।

CARPET : RACTEP :: GOBLET : ?

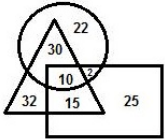
- Ans
- 1. BOGTEL
 - 2. DPOTEL
 - 3. COGTLE
 - 4. BOTGFL

Question ID : 81616110752

Status : Answered

Chosen Option : 2

Q.6 निम्न वेन आरेख में, आयत 'छात्रों' को निरूपित करता है, त्रिभुज 'खिलाड़ियों' को निरूपित करता है और वृत्त 'छात्रावास निवासियों' को निरूपित करता है। दी गई संख्याएं उस विशेष श्रेणी में व्यक्तियों की संख्या को निरूपित करती हैं। कितने छात्र, छात्रावास निवासी और खिलाड़ी दोनों हैं?



- Ans
- 1. 10
 - 2. 22
 - 3. 15
 - 4. 32

Question ID : 81616110793

Status : Answered


Chosen Option : 1

Q.7 उस वेन आरेख का चयन करें, जो निम्न वर्गों के मध्य संबंध का सर्वश्रेष्ठ निरूपण करता है।

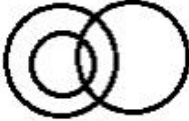
पुरुष, महिलाएं, बेटियां

Ans

✗ 1.



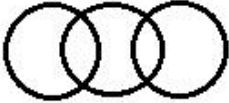
✗ 2.



✓ 3.



✗ 4.



Question ID : 81616110792

Status : Answered

Chosen Option : 3

Q.8 किसी लड़के की ओर इशारा करते हुए, सारिका ने कहा, "वह मेरी बहन के बेटे के पिता की पत्नी की इकलौती बहन का बेटा है।" सारिका का उस लड़के से क्या संबंध है?

Ans ✗ 1. बहन

✗ 2. मामी

✗ 3. नानी

✓ 4. मां

Question ID : 81616110763

Status : Answered

Chosen Option : 3

Q.9 यदि निम्न शब्दों को उनके अंग्रेजी शब्दकोष क्रम के अनुसार व्यवस्थित किया जाए, तो निम्न में से कौन-सा शब्द तीसरे स्थान पर होगा?

1. Place
2. Player
3. Plough
4. Plaster
5. Plaque

Ans 1. Plough
 2. Player
 3. Plaque
 4. Plaster

Question ID : 81616110747

Status : Answered

Chosen Option : 1

Q.10 उस विकल्प का चयन करें, जो तीसरे अक्षर-समूह से ठीक उसी प्रकार संबंधित है, जिस प्रकार दूसरा अक्षर-समूह पहले अक्षर-समूह से संबंधित है।

SPIRIT : TQHSU :: BAMBOO : ?

Ans 1. CZNCNN
 2. AZNCPP
 3. CZNANN
 4. CZNCPP

Question ID : 81616110754

Status : Not Answered

Chosen Option : --

Q.11 उदय, पश्चिम की ओर 25 m चलता है और फिर वह बाईं ओर मुड़ता है और 55 m चलता है। फिर, वह दाईं ओर मुड़ता है और 45 m चलता है। अब वह फिर से दाईं ओर मुड़ता है और 70 m चलता है। प्रारंभिक बिंदु के 15 m उत्तर पहुंचने के लिए, उसे अब किस दिशा में और कितनी दूर चलना होगा?

Ans 1. पूर्व; 45 m
 2. पश्चिम; 70 m
 3. उत्तर; 35 m
 4. पूर्व; 70 m

Question ID : 81616110786

Status : Answered

Chosen Option : 3

Q.12 अभिषेक अवरिति का पति है। अन्वि और अंकुर जुड़वा हैं। रुवि, अवरिति के पति की बहन है। अंकुर, अभिषेक का पुत्र है। रिचा, रुवि की पुत्री है। रिचा अन्वि से किस प्रकार संबंधित है?

Ans 1. माँ
 2. बहन
 3. भाभी
 4. फूफेरी बहन

Question ID : 81616111380

Status : Answered

Chosen Option : 2

Q.13 निम्न समीकरण को संतुलित करने के लिए, किन दो चिह्नों और दो संख्याओं को आपस में बदलना होगा?

$$14 \times 8 + 64 \div 32 - 2 = 88$$

- Ans
- 1. 14 और 2; \times और $+$
 - 2. 8 और 32; \times और $+$
 - 3. 8 और 2; $-$ और \div
 - 4. 32 और 64; $+$ और \div

Question ID : 81616110779

Status : Not Answered

Chosen Option : --

Q.14 उस विकल्प का चयन करें, जो तीसरे अक्षर-समूह से ठीक उसी प्रकार संबंधित है, जिस प्रकार दूसरा अक्षर-समूह पहले अक्षर-समूह से संबंधित है।

PRIEST : TSRPIE :: UMPIRE : ?

- Ans
- 1. URMPIE
 - 2. URPMIE
 - 3. URPMIE
 - 4. RUPMIE

Question ID : 81616110753

Status : Answered

Chosen Option : 1

Q.15 कौन-सा अक्षर-समूह दी गई श्रेणी में प्रश्नवाचक चिह्न (?) के स्थान पर होगा?

KLIMC, JJFIX, IHCES, HFZAN, ?

- Ans
- 1. HEWWI
 - 2. GDXWJ
 - 3. GDUVI
 - 4. GDWWI

Question ID : 81616110746

Status : Answered

Chosen Option : 3

Q.16 'A # B' का मतलब 'A, B का पति है'।
'A @ B' का मतलब 'A, B की बेटी है'।
'A & B' का मतलब 'A, B की बहन है'।

यदि P & Q @ D # K @ S # T है, तो निम्न में से कौन-सा कथन सही नहीं है?

- Ans
- 1. T, K की मां है।
 - 2. D, T की पुत्र-वधू है।
 - 3. S, Q का नाना है।
 - 4. P, K की बेटी है।

Question ID : 81616110764

Status : Answered

Chosen Option : 2

Q.17 दिए गए पैटर्न का ध्यानपूर्वक अध्ययन करें और उस संख्या का चयन करें, जो इसमें प्रश्नवाचक चिह्न (?) के स्थान पर हो सकती है।

18 21 12
7 15 11
175 540 ?

- Ans 1. 150
 2. 303
 3. 253
 4. 273

Question ID : 81616110783
Status : Answered
Chosen Option : 2

Q.18 दिए गए पैटर्न का ध्यानपूर्वक अध्ययन करें और उस संख्या का चयन करें, जो इसमें प्रश्नवाचक चिह्न (?) के स्थान पर हो सकती है।

5 7 100

8 9 181

11 10 ?

- Ans 1. 265
 2. 260
 3. 244
 4. 255

Question ID : 81616110781
Status : Answered
Chosen Option : 3

Q.19 दिए गए पैटर्न का ध्यानपूर्वक अध्ययन करें और उस संख्या का चयन करें, जो इसमें प्रश्नवाचक चिह्न (?) के स्थान पर हो सकती है।

8 7 224

11 13 572

12 15 ?

- Ans 1. 360
 2. 320
 3. 456
 4. 720

Question ID : 81616110780
Status : Answered
Chosen Option : 1

Q.20 निम्न चार अक्षर-समूहों में से तीन किसी प्रकार समान हैं और एक भिन्न है। भिन्न अक्षर-समूह का चयन करें।

- Ans 1. PJF
 2. TNH
 3. LFZ
 4. DXR

Question ID : 81616110750

Status : Answered

Chosen Option : 4

Q.21 उस विकल्प का चयन करें, जो दी गई आकृति में इसके भाग के रूप में अंतःस्थापित (embedded) नहीं है।
 (घुमाने की अनुमति नहीं है)



- Ans 1.
 2.
 3.
 4.

Question ID : 81616110789

Status : Answered

Chosen Option : 2

Q.22 छह मित्र, A, B, C, D, E और F एक वृत्ताकार मेज के परितः मेज के केन्द्र की ओर मुंह किए बैठे हैं। A, E के ठीक बाईं ओर बैठा है। B, F के ठीक दाईं ओर बैठा है। D, F के बाईं ओर दूसरे स्थान पर बैठा है। दोनों छोर से A और C के बीच समान संख्या में व्यक्ति बैठे हैं। A और F के बीच कौन बैठा है?

- Ans 1. B
 2. E
 3. C
 4. D

Question ID : 81616110761

Status : Answered

Chosen Option : 1

Q.23 यदि $G = E < D < R$ और $E = Y > K > Q$ है, तो निम्न में से कौन-सा विकल्प सही नहीं है?

- Ans
- 1. $Y < R$
 - 2. $G < R$
 - 3. $G < Q$
 - 4. $R > Q$

Question ID : 81616110762
Status : Not Answered
Chosen Option : --

Q.24 उस उचित विकल्प का चयन करें, जो निम्न शब्दों के तार्किक एवं अर्थपूर्ण क्रम विन्यास को दर्शाता है।

1. पहनना (Wearing)
2. माप (Measurement)
3. डिजाइनर ड्रेस (Designer dress)
4. सिलाई (Stitching)

- Ans
- 1. 1, 2, 3, 4
 - 2. 2, 3, 1, 4
 - 3. 3, 1, 4, 2
 - 4. 2, 4, 3, 1

Question ID : 81616110748
Status : Answered
Chosen Option : 4

Q.25 यदि 16 जनवरी 2015 को शुक्रवार था, तो 16 जनवरी 2010 को सप्ताह का कौन-सा दिन था?

- Ans
- 1. रविवार
 - 2. सोमवार
 - 3. शनिवार
 - 4. मंगलवार

Question ID : 81616110773
Status : Answered
Chosen Option : 2

Q.26 दिए गए पैटर्न का सावधानीपूर्वक अध्ययन करें, तथा उस संख्या का चयन करें, जो प्रश्नवाचक चिह्न (?) की जगह आ सकती है?

(15, 1, 7, 32) (20, 2, 7, 47) (13, 3, 7, 50) (7, 4, ?, 48)

- Ans
- 1. 8
 - 2. 1
 - 3. 3
 - 4. 5

Question ID : 81616111397
Status : Answered
Chosen Option : 1

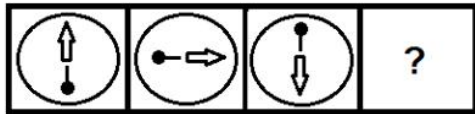
Q.27 उस संख्या का चयन करें, जो तीसरी संख्या से ठीक उसी प्रकार संबंधित है, जिस प्रकार दूसरी संख्या, पहली संख्या से संबंधित है।

12 : 36 :: 18 : ?

- Ans
- 1. 64
 - 2. 81
 - 3. 48
 - 4. 83

Question ID : 81616110776
Status : Answered
Chosen Option : 3

Q.28 उस आकृति का चयन करें, जो निम्न आकृति श्रेणी में प्रश्नवाचक चिह्न (?) के स्थान पर होगी।



Ans

- 1.
- 2.
- 3.
- 4.

Question ID : 81616110787
Status : Answered
Chosen Option : 3

Q.29 यदि 'A' का अर्थ 'जोड़ना' है, 'B' का अर्थ 'गुणा करना' है, 'C' का अर्थ 'घटाना' है और 'D' का अर्थ 'भाग देना' है, तो निम्न व्यंजक का मान ज्ञात करें।

$$55 A 5 B (7 A 4) C 75 D (25 D 5) = ?$$

- Ans
- ✓ 1. 95
 - ✗ 2. 105
 - ✗ 3. 100
 - ✗ 4. 110

Question ID : 81616110777
Status : Answered
Chosen Option : 3

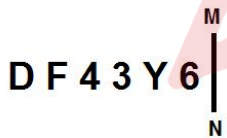
Q.30 उस सही विकल्प का चयन करें, जो दिए गए शब्दों के तार्किक और सार्थक क्रम को दर्शाता है।

1. खाद्य प्रसंस्करण
2. रोपण
3. कटाई
4. सुपरस्टोर
5. पैकेजिंग

- Ans
- ✗ 1. 3, 2, 1, 5, 4
 - ✓ 2. 2, 3, 1, 5, 4
 - ✗ 3. 2, 1, 5, 4, 3
 - ✗ 4. 1, 3, 4, 2, 5

Question ID : 81616111364
Status : Not Attempted and Marked For Review
Chosen Option : --

Q.31 दिए गए संयोजन के सही दर्पण प्रतिबिंब का चयन करें, जब दर्पण को नीचे दिखाए अनुसार MN पर रखा जाता है।



- Ans
- ✓ 1.
 - ✗ 2.
 - ✗ 3.
 - ✗ 4.

Question ID : 81616110791
Status : Answered
Chosen Option : 1

Q.32 कौन-सी संख्या दी गई श्रेणी में प्रश्नवाचक चिह्न (?) के स्थान पर होगी?

115, 107, 98, 88, 77, 65, ?

Ans ✓ 1. 52

✗ 2. 50

✗ 3. 61

✗ 4. 57

Question ID : 81616110770

Status : Answered

Chosen Option : 3

Q.33 दो कथनों के बाद तीन निष्कर्ष I, II और III दिए गए हैं। यह मानते हुए कि कथन सत्य हैं, भले ही ये सामान्य रूप से ज्ञात तथ्यों से भिन्न प्रतीत होते हों, निर्धारित करें कि कौन-सा/से निष्कर्ष कथनों का तार्किक रूप से अनुसरण करता/करते हैं।

कथन:

सभी शिक्षक, इंजीनियर हैं।

सभी क्लर्क, शिक्षक हैं।

निष्कर्ष:

I. कुछ इंजीनियर, क्लर्क हैं।

II. कुछ शिक्षक, क्लर्क हैं।

III. कुछ क्लर्क, इंजीनियर नहीं हैं।

Ans ✗ 1. केवल निष्कर्ष I और III अनुसरण करते हैं

✗ 2. केवल निष्कर्ष II और III अनुसरण करते हैं

✗ 3. सभी निष्कर्ष अनुसरण करते हैं

✓ 4. केवल निष्कर्ष I और II अनुसरण करते हैं

Question ID : 81616110766

Status : Answered

Chosen Option : 4

Q.34 निम्न चार अक्षर-समूह युग्मों में से तीन किसी प्रकार समान हैं और एक भिन्न है। भिन्न अक्षर-समूह युग्म का चयन करें।

Ans ✗ 1. TUKS : SKUT

✓ 2. PSRB : SRPB

✗ 3. LKJR : RJKL

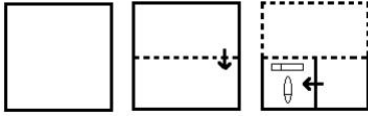
✗ 4. GMDI : IDMG

Question ID : 81616110751

Status : Not Answered

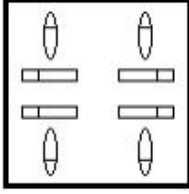
Chosen Option : --

Q.35 नीचे दिखाए अनुसार किसी कागज को मोड़ा और काटा जाता है। खोलने पर यह कागज किस प्रकार प्रतीत होगा?

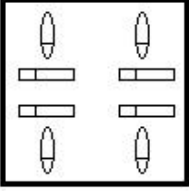


Ans

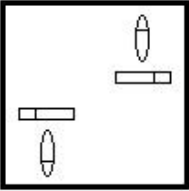
✓ 1.



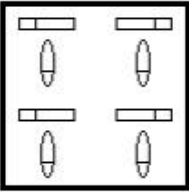
✗ 2.



✗ 3.



✗ 4.



Question ID : 81616110790

Status : Answered

Chosen Option : 1

Q.36 एक सुबह, ध्वनि और प्रीत पार्क में एक दूसरे की ओर मुंह करके बैठे थे। यदि प्रीत की परछाई ध्वनि के बाईं ओर पड़ रही थी, तो ध्वनि किस दिशा में मुंह करके बैठी थी?

Ans ✗ 1. पश्चिम

✗ 2. दक्षिण

✓ 3. उत्तर

✗ 4. पूर्व

Question ID : 81616110784

Status : Answered

Chosen Option : 1

Q.37 कौन-सा अक्षर-समूह दी गई श्रेणी में प्रश्नवाचक चिह्न (?) के स्थान पर होगा?

LONDON, ORQALK, RUTXIH, ?

- Ans
- 1. UXWTFE
 - 2. UXWUFE
 - 3. TXWVFJ
 - 4. UYWUEE

Question ID : 81616110745

Status : Not Answered

Chosen Option : --

Q.38 किसी निश्चित कोड भाषा में ZIGSAW को BOHTEX और BLUFF को CMAGG लिखा जाता है। इसी भाषा में MOVEMENT को किस प्रकार लिखा जाएगा?

- Ans
- 1. NUWINIPV
 - 2. NUWFNIPU
 - 3. OUWINIPV
 - 4. NUWFNFOU

Question ID : 81616111371

Status : Answered

Chosen Option : 3

Q.39 कौन-सा अक्षर-समूह दी गई श्रेणी में प्रश्नवाचक चिह्न (?) के स्थान पर होगा?

KJS, POX, ?, ZYH

- Ans
- 1. STB
 - 2. UTG
 - 3. USD
 - 4. UTC

Question ID : 81616110744

Status : Answered

Chosen Option : 4

Q.40 पांच लड़कियां, A, B, C, D और E निम्न पांच शहरों में से केवल एक शहर की यात्रा करती हैं: मुंबई, दिल्ली, कोलकाता, चेन्नई और जयपुर। E, कोलकाता, मुंबई या चेन्नई की यात्रा नहीं करती है। D, मुंबई, चेन्नई या दिल्ली की यात्रा नहीं करती है। A, जयपुर की यात्रा करती है। C, मुंबई की यात्रा नहीं करती है। C किस शहर की यात्रा करती है?

- Ans
- 1. चेन्नई
 - 2. दिल्ली
 - 3. जयपुर
 - 4. कोलकाता

Question ID : 81616110759

Status : Answered

Chosen Option : 4

Q.41 कौन-सी संख्या दी गई श्रेणी में प्रश्नवाचक चिह्न (?) के स्थान पर होगी?

55, 68, 81, 94, ?, 120

- Ans
- 1. 105
 - 2. 107
 - 3. 111
 - 4. 109

Question ID : 81616110769

Status : Answered

Chosen Option : 1

Q.42 छह दोस्त, K, L, M, N, O और P सीधी रेखा में बैठे हैं। सभी उत्तर की ओर मुंह किए हुए हैं। K, M और N के बीच बैठा है। O, M के दाईं ओर से तीसरे स्थान पर बैठा है। P, K के बाईं ओर से तीसरे स्थान पर बैठा है। M, L के ठीक दाईं ओर बैठा है। कौन से दो व्यक्ति छोरों पर बैठे हैं?

- Ans
- 1. N और L
 - 2. O और N
 - 3. P और N
 - 4. P और O

Question ID : 81616110760

Status : Not Answered

Chosen Option : --

Q.43 सुयश अपने कार्यालय से चलना शुरू करता है और दक्षिण की ओर 40 m चलता है। वहां से, वह दाईं ओर मुड़ता है और 35 m चलता है और फिर से वह दाईं ओर मुड़ता है और 70 m चलता है। अंत में, वह एक बार और दाईं ओर मुड़ता है और अपने घर तक पहुंचने के लिए 75 m चलता है। उसके कार्यालय और उसके घर के बीच सबसे छोटी दूरी ज्ञात करें।

- Ans
- 1. 40 m
 - 2. 85 m
 - 3. 50 m
 - 4. 70 m

Question ID : 81616110785

Status : Not Attempted and
Marked For Review

Chosen Option : --

Q.44 कौन-सी संख्या दी गई श्रेणी में प्रश्नवाचक चिह्न (?) के स्थान पर होगी?

61, 73, 99, 141, 201, ?

- Ans
- 1. 244
 - 2. 269
 - 3. 281
 - 4. 261

Question ID : 81616110772

Status : Answered

Chosen Option : 1

Q.45 यदि किसी संख्या, संख्या के वर्ग और उसके घन का योगफल 584 है, तो संख्या ज्ञात करें।

- Ans
- 1. 6
 - 2. 7
 - 3. 9
 - 4. 8

Question ID : 81616110775
Status : Not Answered
Chosen Option : --

Q.46 ₹5,110 की राशि को राजेश, विवेक और कृपाल के बीच इस प्रकार विभाजित करना है कि राजेश को विवेक से दोगुनी राशि मिले और कृपाल को राजेश से दोगुनी राशि मिले। कृपाल को कितनी राशि मिलेगी?

- Ans
- 1. ₹2,236
 - 2. ₹1,550
 - 3. ₹2,188
 - 4. ₹2,920

Question ID : 81616110774
Status : Answered
Chosen Option : 2

Q.47 किसी निश्चित कूट भाषा में 'BAYONET' को '2176552' और 'JOKE' को '1625' लिखा जाता है। उसी कूट भाषा में 'HAPPIER' को किस प्रकार लिखा जाएगा?

- Ans
- 1. 8177959
 - 2. 8166959
 - 3. 8177918
 - 4. 9188959

Question ID : 81616110757
Status : Answered
Chosen Option : 4

Q.48 तीन कथनों के बाद तीन निष्कर्ष I, II और III दिए गए हैं। यह मानते हुए कि कथन सत्य हैं, भले ही ये सामान्य रूप से ज्ञात तथ्यों से भिन्न प्रतीत होते हों, निर्धारित करें कि कौन-सा/से निष्कर्ष कथनों का तार्किक रूप से अनुसरण करता/करते है/हैं।

कथन:

- कुछ पौधे, फूल हैं।
- कुछ फूल, फल हैं।
- सभी फूल, बगीचे हैं।

निष्कर्ष:

- I. कुछ बगीचे, पौधे हैं।
- II. कुछ फल, बगीचे हैं।
- III. कुछ बगीचे, फूल हैं।

- Ans
- 1. केवल निष्कर्ष II और III अनुसरण करते हैं
 - 2. केवल निष्कर्ष I और III अनुसरण करते हैं
 - 3. केवल निष्कर्ष I और II अनुसरण करते हैं
 - 4. सभी निष्कर्ष अनुसरण करते हैं

Question ID : 81616110767
Status : Answered
Chosen Option : 4

Q.49 गणितीय चिह्नों के उस उचित संयोजन का चयन करें, जिसे निम्न समीकरण को संतुलित करने के लिए * के स्थान पर बाएं से दाएं क्रमिक रूप से रखा जा सके।

$$30 * 3 * 16 * 4 * 24 * 70$$

- Ans
- 1. $\times, \div, +, -, =$
 - 2. $\times, +, \div, -, =$
 - 3. $\div, \times, -, +, =$
 - 4. $+, \times, -, \div, =$

Question ID : 81616110778

Status : Not Answered

Chosen Option : --

Q.50 पांच व्यक्ति P, Q, R, S और T में, T, P से बड़ा है, Q, T से छोटा है, S, R से बड़ा है और P, S से बड़ा है लेकिन Q से छोटा है। इन सभी में सबसे बड़ा कौन है?

- Ans
- 1. Q
 - 2. P
 - 3. T
 - 4. S

Question ID : 81616110758

Status : Answered

Chosen Option : 2

Section : General Awareness

Q.1 निम्न में से कौन-सा विकल्प मुगल काल के दौरान 'नौबत खाना' नामक स्थान का सही विवरण है?

- Ans
- 1. नगाड़ा घर
 - 2. महल के सुरक्षा प्रभारी का कार्यालय
 - 3. निजी चर्चा के लिए सदन
 - 4. शाही महिलाओं का निजी खजाना

Question ID : 81616110822

Status : Answered

Chosen Option : 2

Q.2 निम्न में से कौन-सा देश, भगवान राम की महिमा दर्शानेवाले एक मुखौटायुक्त नाटक नृत्य प्रदर्शन 'खोन' (Khon) से संबंधित है?

- Ans
- 1. वियतनाम
 - 2. थाईलैंड
 - 3. जापान
 - 4. इंडोनेशिया

Question ID : 81616110797

Status : Answered

Chosen Option : 4

Q.3 भारत के निम्न किस गवर्नर जनरल ने औपनिवेशिक शासन के दौरान भारत के राज्यों में उत्तराधिकार के मुद्दे से निपटने के लिए व्यपगत का सिद्धांत (Doctrine of Lapse) तैयार किया था?

- Ans
- 1. लॉर्ड डलहौजी
 - 2. लॉर्ड कैनिंग
 - 3. सर जॉन मैकफर्सन
 - 4. जॉन शोर

Question ID : 81616110824
Status : Answered
Chosen Option : 1

Q.4 यमुना नदी की सहायक नदी चंबल, निम्न में से किस राज्य से होकर नहीं गुजरती है?

- Ans
- 1. गुजरात
 - 2. उत्तर प्रदेश
 - 3. मध्य प्रदेश
 - 4. राजस्थान

Question ID : 8161611021
Status : Answered
Chosen Option : 3

Q.5 मानव शरीर में निम्न में से कौन-से प्रकार की शिराएं, पेशी ऊतक के भीतर स्थित होती हैं और पास में संगत धमनी होती है?

- Ans
- 1. दैहिक शिराएं (Systemic veins)
 - 2. गहरी शिराएं (Deep veins)
 - 3. उपरिस्थ शिराएं (Superficial veins)
 - 4. फुफ्फुस शिराएं (Pulmonary veins)

Question ID : 8161611831
Status : Answered
Chosen Option : 4

Q.6 दैमाबाद नामक प्रागैतिहासिक स्थल निम्न में से किस राज्य में स्थित है?

- Ans
- 1. महाराष्ट्र
 - 2. मध्य प्रदेश
 - 3. उत्तर प्रदेश
 - 4. गुजरात

Question ID : 8161611230
Status : Not Answered
Chosen Option : --

Q.7 वधावन नामक स्थान पर एक प्रमुख बंदरगाह स्थापित करने के लिए केंद्र सरकार ने सैद्धांतिक स्वीकृति प्रदान की है। यह स्थान निम्न में से किस राज्य में स्थित है?

- Ans
- 1. गुजरात
 - 2. ओडिशा
 - 3. महाराष्ट्र
 - 4. आंध्र प्रदेश

Question ID : 8161611210
Status : Answered
Chosen Option : 2

Q.8 निम्न में से कौन पाकिस्तान राष्ट्रीय आंदोलन के सदस्यों में से एक है, जिसने 1933 में पाकिस्तान नाम रखा था?

- Ans
- 1. मौलाना आज़ाद
 - 2. मुहम्मद उमर
 - 3. मोहम्मद अली जिन्ना
 - 4. चौधरी रहमत अली

Question ID : 81616112054
Status : Answered
Chosen Option : 3

Q.9 कलम बांधना (ग्राफ्टिंग) और _____ औद्योगिक तकनीकें हैं, जिनका उपयोग दो या दो से अधिक पौधों के भागों को जोड़ने के लिए किया जाता है, ताकि वे एक ही पौधे के रूप में विकसित हो सकें।

- Ans
- 1. मुकुलन (budding)
 - 2. लेयरिंग
 - 3. संलयन (fusion)
 - 4. कर्तन (cutting)

Question ID : 81616112035
Status : Answered
Chosen Option : 1

Q.10 पौधों की सिंचाई के लिए निम्न में से किस तकनीक के अंतर्गत संकरी नलिकाओं का उपयोग किया जाता है, जिससे पानी सीधे पौधों की जड़ों तक पहुंचता है?

- Ans
- 1. छिड़काव (स्प्रिंकलर) सिंचाई
 - 2. सीढ़ीदार खेती
 - 3. अधोभूमि सिंचाई
 - 4. टपक (ड्रिप) सिंचाई

Question ID : 81616111431
Status : Answered
Chosen Option : 2

Q.11 निम्न में से किस वर्ष में भारत का सबसे पुराना और सबसे बड़ा स्वतंत्र, गैर-लाभकारी आर्थिक नीति अनुसंधान संस्थान, NCAER (राष्ट्रीय अनुप्रयुक्त आर्थिक अनुसंधान परिषद) को स्थापित किया गया था?

- Ans
- 1. 1952
 - 2. 1965
 - 3. 1956
 - 4. 1959

Question ID : 81616112031
Status : Not Answered
Chosen Option : --

Q.12 2011 की जनगणना के अनुसार, भारत का दूसरा सबसे अधिक आबादी वाला राज्य कौन-सा है?

- Ans
- 1. महाराष्ट्र
 - 2. राजस्थान
 - 3. पश्चिम बंगाल
 - 4. मध्य प्रदेश

Question ID : 81616111636
Status : Answered
Chosen Option : 1

Q.13 निम्न में से कौन-सा पद एक ऐसे परिदृश्य का वर्णन करता है, जिसमें एक अर्थव्यवस्था एक ही समय में मुद्रास्फीति और वास्तविक उत्पादन में गिरावट, दोनों का सामना करती है?

- Ans
- 1. प्रत्यवस्फीति (Reflation)
 - 2. स्फीतिजनित मंदी (Stagflation)
 - 3. मंदी (Recession)
 - 4. अपस्फीति (Deflation)

Question ID : 81616111828
Status : Answered
Chosen Option : 1

Q.14 अवायवीय जीवाणुओं द्वारा कार्बनिक पदार्थ के विघटन से प्राकृतिक रूप से उत्पन्न होने वाली गैस किस नाम से जानी जाती है, जिसका उपयोग उर्जा के उत्पादन में किया जाता है?

- Ans
- 1. द्रवीकृत पेट्रोलियम गैस
 - 2. प्राकृतिक गैस
 - 3. बायोगैस
 - 4. संपीडित प्राकृतिक गैस

Question ID : 81616111419
Status : Answered
Chosen Option : 3

Q.15 मार्च 2020 में, राष्ट्रीय विकलांग वित्त एवं विकास निगम (NHFDC) ने दिव्यांगजन समुदाय के बीच उद्यमशीलता और ज्ञान को बढ़ावा देने के लिए एक सप्ताह तक चलने वाले उत्सव का आयोजन किया। इस उत्सव को _____ कहा जाता है।

- Ans
- 1. श्रेष्ठ (SHRESHTH)
 - 2. एकम (EKAM)
 - 3. उत्तम (UTTAM)
 - 4. प्रथम (PRATHAM)

Question ID : 81616110833

Status : Not Answered

Chosen Option : --

Q.16 निम्न में से कौन, मार्च 2020 में 'सामाजिक लाभार्थ हेतु प्रौद्योगिकी के अनुप्रयोगों द्वारा उत्कृष्टता दर्शानेवाली युवा महिलाओं के लिए राष्ट्रीय पुरस्कार' की प्राप्तकर्ता थीं?

- Ans
- 1. मुथैया वनिता
 - 2. गगनदीप कांग
 - 3. श्वेता रावत
 - 4. ऋतु करिधाल

Question ID : 8161611031

Status : Not Answered

Chosen Option : --

Q.17 निम्न में से कौन-सा सानो बनैल (पिग्मी हॉग) का जंगली निवास स्थान है?

- Ans
- 1. मानस राष्ट्रीय उद्यान
 - 2. जिम कॉर्बेट राष्ट्रीय उद्यान
 - 3. कान्हा बाघ अभयारण्य
 - 4. राजाजी राष्ट्रीय उद्यान

Question ID : 81616110808

Status : Answered

Chosen Option : 2

Q.18 भारतीय संविधान का निम्न में से कौन-सा अनुच्छेद, केंद्र को राज्यपाल की सिफारिश पर राज्य प्रशासन को नियंत्रण में लेने की शक्ति देता है?

- Ans
- 1. अनुच्छेद 243
 - 2. अनुच्छेद 124
 - 3. अनुच्छेद 105
 - 4. अनुच्छेद 356

Question ID : 81616112065

Status : Answered

Chosen Option : 1

Q.19 निम्न में से किस संविधान संशोधन के माध्यम से संपत्ति का अधिकार, मौलिक अधिकार के रूप में अस्तित्व में नहीं रहा?

- Ans
- 1. 45वें
 - 2. 42वें
 - 3. 43वें
 - 4. 44वें

Question ID : 81616110836

Status : Answered

Chosen Option : 2

Q.20 किसी राज्य के लेखांकन से संबंधित भारत के नियंत्रक और महालेखा परीक्षक की रिपोर्ट को:

- Ans
- 1. लेखापरीक्षा टिप्पणियों के अनुपालन के लिए उस राज्य के वित्त मंत्री को प्रस्तुत किया जाता है।
 - 2. नियंत्रक और महालेखा परीक्षक की आधिकारिक वेबसाइट पर अपलोड किया जाता है, जिससे आम जनता यह जान सके कि सार्वजनिक धन, सरकारी अधिकारियों द्वारा सही तरीके से खर्च किया गया है, या नहीं।
 - 3. राष्ट्रपति को प्रस्तुत किया जाता है, जिनके द्वारा यह संसद के प्रत्येक सदन के समक्ष रखी जाती है।
 - 4. राज्य के राज्यपाल को प्रस्तुत किया जाता है, जो उसे राज्य के विधानमंडल के समक्ष रखता है।

Question ID : 8161611452

Status : Answered

Chosen Option : 1

Q.21 अरावली पर्वत श्रेणी की सबसे ऊँची चोटी कौन-सी है?

- Ans
- 1. चौखम्बा
 - 2. साल्टोरो कांगड़ी
 - 3. कामेट
 - 4. गुरु शिखर

Question ID : 8161611839

Status : Answered

Chosen Option : 1

Q.22 मार्च 2020 में, प्रधान मंत्री नरेंद्र मोदी ने अपने सोशल मीडिया अकाउंट को भारतीय महिला लक्ष्य-प्राप्तिकर्ताओं को उनकी उपलब्धियों को साझा करने के लिए सौंप दिया। निम्न में से कौन उनमें से एक नहीं थीं?

- Ans
- 1. आरिफा जान
 - 2. स्नेहा मोहनदास
 - 3. वजिरा चित्रसेना
 - 4. विजया पवार

Question ID : 8161611036

Status : Not Answered

Chosen Option : --

Q.23 निम्न में से किस राष्ट्र के साथ भारत ने एक दूसरे के रक्षा ठिकानों तक पहुंच प्राप्त करने के लिए जून 2020 में एक ऐतिहासिक 'रक्षा समझौता' किया है?

- Ans
- 1. इज़राइल
 - 2. मंगोलिया
 - 3. ताइवान
 - 4. ऑस्ट्रेलिया

Question ID : 81616111650
Status : Answered
Chosen Option : 1

Q.24 निम्न में से किस उपकरण का डिजिटल सर्किट में उपयोग किया जाता है, ताकि बड़े कंप्यूटर की मेमोरी में संग्रहीत जानकारी क्षणिक बिजली की विफलता के दौरान नष्ट न हो जाए?

- Ans
- 1. थर्मिस्टर (Thermistor)
 - 2. संधारित्र (Capacitor)
 - 3. डायोड (Diode)
 - 4. ट्रांसमीटर (Transmitter)

Question ID : 81616111011
Status : Answered
Chosen Option : 2

Q.25 फरवरी 2020 में, भारतीय रेलवे ने अपना पहला 'रेस्टोरेंट ऑन व्हील्स (Restaurant on Wheels)' आरंभ किया। रेस्टोरेंट का उद्घाटन _____ रेलवे स्टेशन के परिसंचारी क्षेत्र में किया गया था।

- Ans
- 1. त्रिवेन्द्रम सेंट्रल
 - 2. चेन्नई सेंट्रल
 - 3. आसनसोल
 - 4. कटक

Question ID : 81616110829
Status : Answered
Chosen Option : 2

Q.26 भारतीय संविधान का निम्न में से कौन-सा अनुच्छेद 35 वर्ष की आयु को भारत के राष्ट्रपति पद के लिए एक पात्रता मानदंड के रूप में घोषित करता है?

- Ans
- 1. अनुच्छेद 60
 - 2. अनुच्छेद 62
 - 3. अनुच्छेद 56
 - 4. अनुच्छेद 58

Question ID : 81616111043
Status : Not Answered
Chosen Option : --

Q.27 'स्पीकिंग ट्रुथ टू पावर: माई अल्टरनेटिव व्यू (Speaking Truth to Power: My Alternative View)' नामक पुस्तक _____ के लेखों का संग्रह है।

- Ans 1. पी. चिदंबरम
 2. यशवंत सिन्हा
 3. अरुण शौरी
 4. मणिशंकर अय्यर

Question ID : 81616110827
Status : Not Answered
Chosen Option : --

Q.28 निम्न में से किसने दिसंबर 2020 में, पी. एस. श्रीधरन पिल्लई द्वारा लिखित 'ओह मिजोरम (OH Mizoram)' नामक अंग्रेजी कविताओं की पुस्तक का वर्चुअल रूप से विमोचन किया था?

- Ans 1. नरेंद्र मोदी
 2. अमित शाह
 3. एम. वेंकैया नायडू
 4. जितेंद्र सिंह

Question ID : 81616112062
Status : Answered
Chosen Option : 3

Q.29 निम्न में से कौन-सा एक मेंडेलियन विकार नहीं है?

- Ans 1. टर्नर सिंड्रोम
 2. सिकल सेल एनीमिया
 3. फेनिलकीटोन्यूरिया
 4. हीमोफीलिया

Question ID : 81616111223
Status : Not Answered
Chosen Option : --

Q.30 जहाँगीर की मृत्यु किस वर्ष हुई थी?

- Ans 1. 1557
 2. 1675
 3. 1559
 4. 1627

Question ID : 81616111847
Status : Answered
Chosen Option : 1

Q.31 टेनिस खिलाड़ी नोवाक जोकोविच निम्न में से किस देश के लिए खेलते हैं?

- Ans
- 1. स्पेन
 - 2. सर्बिया
 - 3. फ्रांस
 - 4. ऑस्ट्रिया

Question ID : 81616110843
Status : Answered
Chosen Option : 2

Q.32 जब किसी मिश्रण में पानी मिलाने पर इसका भारी घटक अवक्षेपित हो जाता है, तो प्रक्रिया को _____ कहा जाता है।

- Ans
- 1. सूत बनाना (yarning)
 - 2. छानना (sieving)
 - 3. अवसादन (sedimentation)
 - 4. गाहना (threshing)

Question ID : 81616111425
Status : Answered
Chosen Option : 3

Q.33 तेय्यम (Theyyam) निम्न में से किस राज्य की धार्मिक कला शैली है?

- Ans
- 1. गोवा
 - 2. तमिलनाडु
 - 3. कर्नाटक
 - 4. केरल

Question ID : 81616111821
Status : Answered
Chosen Option : 2

Q.34 फिटकरी (Alum) बनाने के लिए बॉक्साइट को _____ में घोला जाता है।

- Ans
- 1. सल्फ्यूरिक अम्ल
 - 2. बोरिक अम्ल
 - 3. फॉस्फोरिक अम्ल
 - 4. सिट्रिक अम्ल

Question ID : 81616111627
Status : Answered
Chosen Option : 1

Q.35 झिझिया नृत्य निम्न में से किस राज्य का लोकप्रिय लोक नृत्य है?

- Ans
- 1. मध्य प्रदेश
 - 2. बिहार
 - 3. हरियाणा
 - 4. उत्तर प्रदेश

Question ID : 8161611824
Status : Answered
Chosen Option : 3

Q.36 निम्न में से किस देश ने आईसीसी (ICC) महिला टी-20 (T20) विश्व कप 2020 जीता?

- Ans
- 1. ऑस्ट्रेलिया
 - 2. इंग्लैंड
 - 3. श्रीलंका
 - 4. भारत

Question ID : 81616110841
Status : Answered
Chosen Option : 4

Q.37 जून 2020 में, भारत की केंद्र सरकार ने _____ के लाभ हेतु प्रधानमंत्री स्वनिधि योजना (PM SVANidhi scheme) की शुरुआत की थी।

- Ans
- 1. किसानों
 - 2. लघु उद्योगों
 - 3. सड़क विक्रेताओं
 - 4. प्रवासी मजदूरों

Question ID : 8161611649
Status : Answered
Chosen Option : 1

Q.38 निम्न में से किस राज्य के राज्यपाल के आधिकारिक निवास में एक भूमिगत बंकर संग्रहालय स्थित है?

- Ans
- 1. तमिलनाडु
 - 2. कर्नाटक
 - 3. महाराष्ट्र
 - 4. गुजरात

Question ID : 8161611205
Status : Not Answered
Chosen Option : --

Q.39 निम्न में से कौन-से देश में, इंटरनेशनल एसोसिएशन ऑफ एथलेटिक्स फेडरेशन (IAAF) का मुख्यालय स्थित है?

- Ans 1. मोनाको
 2. ब्राज़ील
 3. जापान
 4. भारत

Question ID : 81616111865
 Status : Answered
 Chosen Option : 1

Q.40 विश्व हस्त प्रक्षालन दिवस (Global Handwashing Day) निम्न में से किस तारीख को मनाया जाता है?

- Ans 1. 6 दिसंबर
 2. 24 जून
 3. 15 अक्टूबर
 4. 4 मार्च

Question ID : 81616112037
 Status : Answered
 Chosen Option : 4

Q.41 निम्न में से कौन-सी गैस, तार (फिलामेंट) के जीवनकाल को बढ़ाने के लिए तापदीप्त बल्बों में भरी जाती है?

- Ans 1. नाइट्रोजन
 2. ओज़ोन
 3. कार्बन डाइऑक्साइड
 4. ऑक्सीजन

Question ID : 81616111017
 Status : Answered
 Chosen Option : 1

Q.42 जापान द्वारा निम्न में से किस शहर में द्वितीय विश्व युद्ध को समर्पित स्मारक बनाया गया है?

- Ans 1. दिसपुर
 2. अगरतला
 3. इम्फाल
 4. गंगटोक

Question ID : 81616111209
 Status : Answered
 Chosen Option : 3

Q.43 भारत की जनगणना 2011 के अनुसार, निम्न में से किस केंद्र शासित प्रदेश का जनसंख्या घनत्व सबसे कम था?

- Ans 1. लक्षद्वीप
 2. पुदुच्चेरी
 3. अंडमान व निकोबार द्वीप समूह
 4. दादरा और नगर हवेली

Question ID : 81616111225
 Status : Answered
 Chosen Option : 4

Q.44 निम्न में से किस संशोधन अधिनियम के द्वारा, संविधान की प्रस्तावना में संशोधन करके 'राष्ट्र की एकता' शब्द को 'राष्ट्र की एकता और अखंडता' में बदला गया?

- Ans
- 1. 35वां संशोधन अधिनियम
 - 2. 81वां संशोधन अधिनियम
 - 3. 42वां संशोधन अधिनियम
 - 4. 105वां संशोधन अधिनियम

Question ID : 81616112069
Status : Not Answered
Chosen Option : --

Q.45 निम्न में से किस कारण से भारत के राष्ट्रपति को महाभियोग द्वारा उनके पद से हटाया जा सकता है?

- Ans
- 1. नैतिक पतन हेतु
 - 2. संविधान का उल्लंघन करने पर
 - 3. किसी आपराधिक कृत्य हेतु
 - 4. मानसिक अस्थिरता हेतु

Question ID : 81616111449
Status : Answered
Chosen Option : 3

Q.46 संयुक्त राज्य अमेरिका के कृषि विभाग के अनुसार, भारत में निम्न में से किस प्रकार का मृदा क्रम सर्वाधिक है?

- Ans
- 1. वर्टीसॉल (Vertisols)
 - 2. एरीडीसॉल (Aridisols)
 - 3. अल्फीसॉल (Alfisols)
 - 4. इनसेप्टिसोल (Inceptisols)

Question ID : 81616111229
Status : Not Answered
Chosen Option : --

Q.47 वैश्विक भूख सूचकांक (ग्लोबल हंगर इंडेक्स) 2019 में भारत का स्थान _____ है।

- Ans
- 1. 104 वां
 - 2. 92 वां
 - 3. 102 वां
 - 4. 98 वां

Question ID : 81616111417
Status : Answered
Chosen Option : 2

Q.48 निम्न में से किस नदी का उल्लेख वैदिक साहित्य में 'वितस्ता' के रूप में किया गया है?

- Ans
- 1. ब्यास
 - 2. चिनाब
 - 3. झेलम
 - 4. रावी

Question ID : 81616110820
Status : Answered
Chosen Option : 1

Q.49 अम्मान, जॉर्डन में आयोजित एशियाई मुक्केबाजी ओलंपिक क्वालीफायर्स में निम्न में से किस भारतीय मुक्केबाज ने पुरुषों के 69 kg भार वर्ग में दूसरा स्थान हासिल किया?

- Ans
- 1. आशीष कुमार
 - 2. अमित पंघल
 - 3. मनीष कौशिक
 - 4. विकास कृष्णन

Question ID : 8161611251
Status : Answered
Chosen Option : 3

Q.50 निम्न में से किस राज्य में, 'बतुकम्मा' नामक राज्य उत्सव मनाया जाता है?

- Ans
- 1. तेलंगाना
 - 2. केरल
 - 3. ओडिशा
 - 4. तमिलनाडु

Question ID : 81616110794
Status : Not Answered
Chosen Option : --

Section : English Language and Comprehension

Q.1 Select the correct direct narration of the given sentence.

You have asked Varun why he feels this is important for him.

- Ans
- 1. You ask Varun, "Why do you feel that is important to you?"
 - 2. You have asked Varun, "Why do you feel this is important for you?"
 - 3. You have asked Varun, "Why you feel this is important to you?"
 - 4. You asked Varun, "Why do you feel this is important for him?"

Question ID : 8161611484
Status : Answered
Chosen Option : 3

Q.2 Given here are four sentences. The first sentence is in correct order, while the rest of the sentences are jumbled. Pick the option that gives their correct order.

- A. Raja Ravi Verma was a famous Indian painter.
- B. He was also known for making affordable prints of his paintings available to the public.
- C. His works were a fusion of European art and Indian sensibility.
- D. This enhanced the interest of public in fine arts.

- Ans
- 1. ABCD
 - 2. ADBC
 - 3. ADCB
 - 4. ACBD

Question ID : 81616110912
Status : Answered
Chosen Option : 2

Q.3 Select the most appropriate option to substitute the underlined segment in the given sentence. If there is no need to substitute it, select 'No substitution'.

Many of the food required for the moving migrant workers is arranged by the state government.

- Ans
- 1. No substitution
 - 2. Much of food
 - 3. Most of the food
 - 4. Any of the food

Question ID : 8161611082
Status : Answered
Chosen Option : 3

Q.4 Select the correct indirect form of the given sentence.

"Put this suitcase in the first class compartment," said Mr. Dey to the porter.

- Ans
- 1. Mr. Dey asked the porter to put this suitcase in the first class compartment.
 - 2. Mr. Dey told the porter that he should put that suitcase in the first class compartment.
 - 3. Mr. Dey told the porter to put that suitcase in the first class compartment.
 - 4. Mr. Dey requested the porter to put that suitcase in the first class compartment.

Question ID : 8161611278
Status : Answered
Chosen Option : 3

Q.5 Select the most appropriate ANTONYM of the given word.

PRODUCE (verb)

- Ans
- 1. destroy
 - 2. arrange
 - 3. yield
 - 4. harvest

Question ID : 8161611536
Status : Answered
Chosen Option : 2

Q.6 Select the correct indirect narration of the given sentence.

The coach said to her, "First relax thoroughly before the game starts."

- Ans
- 1. The coach asked her to relax thoroughly before the game started first.
 - 2. The coach advised her first to relax thoroughly before the game started.
 - 3. The coach told her that she should first relax thoroughly before the game started.
 - 4. The coach asked her to relax before the game starts thoroughly.

Question ID : 81616111480
Status : Answered
Chosen Option : 3

Q.7 Select the option that arranges the given sentences in the correct sequence. The first sentence is in the correct position.

- A. At a school function, after the school prayer, the Principal welcomes the chief guest.
- B. This is followed by a variety entertainment programme by the school children.
- C. The function comes to an end with the national anthem.
- D. Then, the chief guest gives his speech and distributes prizes to students.
- E. The assistant principal then proposes the vote of thanks.

- Ans
- 1. AEDCB
 - 2. ACBED
 - 3. ABDEC
 - 4. ABEDC

Question ID : 81616111528
Status : Not Answered
Chosen Option : --

Q.8 Select the correct indirect form of the given sentence.

The child said, "Will we stay here tonight?"

- Ans
- 1. The child asked if we would stay there tonight.
 - 2. The child asked will we stay here tonight.
 - 3. The child asked if they will stay here that night.
 - 4. The child asked if they would stay there that night.

Question ID : 81616111072
Status : Answered
Chosen Option : 3

Q.9 The following sentence has been split into four segments. Identify the segment that contains a grammatical error.

The book that / I lost it / is too expensive / for me to buy now.

- Ans
- 1. The book that
 - 2. I lost it
 - 3. is too expensive
 - 4. for me to buy now

Question ID : 81616112083
Status : Answered
Chosen Option : 2

Q.10 Select the most appropriate option to fill in the blank.

I will be joining the office _____ a week's time.

- Ans
- 1. in
 - 2. at
 - 3. during
 - 4. by

Question ID : 81616110888
Status : Answered
Chosen Option : 2

Q.11 Select the option that expresses the given sentence in reported speech.

You said, "I will bake a walnut cake."

- Ans
- 1. You told that you would baked a walnut cake.
 - 2. I said that you will bake a walnut cake.
 - 3. You said that you will bake a walnut cake.
 - 4. You said that you would bake a walnut cake.

Question ID : 81616110864
Status : Not Answered
Chosen Option : --

Q.12 Given here are four sentences. The first sentence is in correct order, while the rest of the sentences are jumbled. Pick the option that gives their correct order.

- A. Thick socks and tight shoes are worn in winters.
- B. They also leave no space to move about in.
- C. Hence, the skin dries up and tears.
- D. These prevent the feet from receiving enough air.

- Ans
- 1. ABDC
 - 2. ACBD
 - 3. ADCB
 - 4. ACDB

Question ID : 81616110914
Status : Answered
Chosen Option : 1

Q.13 Select the correct passive voice of the given sentence.

I have written a very strong letter to the local administration regarding the deteriorating law and order situation.

- Ans
- 1. The local administration has written a very strong letter to me regarding the deteriorating law and order situation.
 - 2. The local administration is writing a very strong letter regarding the deteriorating law and order to me.
 - 3. A very strong letter has been written by me to the local administration regarding the deteriorating law and order situation.
 - 4. A very strong letter was written to the local administration regarding the deteriorating law and order situation by me.

Question ID : 81616111678
Status : Not Answered
Chosen Option : --

Q.14 The following sentence has been split into four segments. Identify the segment that contains a grammatical error.

It is difficult to say / which of the / two girls in that house / is the eldest?

- Ans
- 1. It is difficult to say
 - 2. is the eldest
 - 3. two girls in that house
 - 4. which of the

Question ID : 81616112081
Status : Answered
Chosen Option : 4

Q.15 Select the most appropriate synonym of the given word.

Emblem

- Ans
- 1. Refinement
 - 2. Problem
 - 3. Expression
 - 4. Symbol

Question ID : 81616112147
Status : Answered
Chosen Option : 3

Q.16 Select the most appropriate option to substitute the underlined segment in the given sentence. If no substitution is required, select 'No substitution'.

Are you trying to say that you are stupid so proud of it?

- Ans
- 1. No substitution
 - 2. so that
 - 3. but
 - 4. though

Question ID : 81616111490
Status : Answered
Chosen Option : 2

Q.17 Fill in the blank with the most appropriate word.

Your son hasn't caused any problems; in fact, he has been very _____.

- Ans
- 1. cooperation
 - 2. cooperated
 - 3. cooperative
 - 4. cooperatively

Question ID : 81616111502
Status : Answered
Chosen Option : 1

Q.18 Select the correct active voice of the given sentence.

If our liberty has to be maintained, then it must be fought for.

- Ans 1. If we have to maintain our liberty, then we must fight for it.
 2. If our liberty has to be maintained, then we must fight for it.
 3. If we have to maintain our liberty, then it must be fought for.
 4. If our liberty has to maintain, then we fight for it.

Question ID : 8161611478
Status : Not Answered
Chosen Option : --

Q.19 Select the most appropriate option to improve the underlined segment in the given sentence. If there is no need to improve it, select 'No improvement required'.

The little girl chatters away as she hurry up the road with her mother.

- Ans 1. hurry on
 2. No improvement required
 3. hurries down
 4. hurried up

Question ID : 81616110876
Status : Answered
Chosen Option : 4

Q.20 Select the most appropriate option to substitute the underlined segment in the given sentence. If there is no need to substitute it, select 'No substitution'.

You should exercise regularly in the morning even if you may remain fit.

- Ans 1. so that
 2. No substitution
 3. because
 4. in case

Question ID : 8161611288
Status : Answered
Chosen Option : 1

Q.21 Select the most appropriate ANTONYM of the given word.

BORING

- Ans 1. supporting
 2. preventing
 3. exciting
 4. enduring

Question ID : 8161611538
Status : Answered
Chosen Option : 3

Q.22 Select the most appropriate ANTONYM of the given word.

Moderate

- Ans
- 1. Easy
 - 2. Temperate
 - 3. Medium
 - 4. Extreme

Question ID : 81616112154
Status : Answered
Chosen Option : 3

Q.23 Select the most appropriate option to fill in the blank.

She is as fearless _____ a tigress.

- Ans
- 1. as
 - 2. also
 - 3. like
 - 4. so

Question ID : 81616110884
Status : Answered
Chosen Option : 1

Q.24 Select the option that expresses the given sentence in passive voice.

The gardener pruned all the rose bushes.

- Ans
- 1. All the rose bushes were pruned by the gardener.
 - 2. All the rose bushes was pruned by the gardener.
 - 3. All the rose bushes are being pruned by the gardener.
 - 4. All the rose bushes have been pruned by the gardener.

Question ID : 81616110857
Status : Answered
Chosen Option : 2

Q.25 Select the most appropriate meaning of the given idiom.

The apple of someone's eyes

- Ans
- 1. the apple that is rotten and irritating one's eyes
 - 2. the person that someone loves and is proud of
 - 3. the special apple that someone has bought
 - 4. the apple a day that keeps the doctor away

Question ID : 81616111543
Status : Answered
Chosen Option : 3

Q.26 Select the correct passive voice of the given sentence.

They switched off lights in memory of the martyrs.

- Ans
- 1. Lights had been switched off in memory of the martyrs by them.
 - 2. Lights were being switched off in memory of the martyrs by them.
 - 3. Lights were switched off by them in memory of the martyrs.
 - 4. Lights have been switched off in memory of the martyrs by them.

Question ID : 81616111676
Status : Not Answered
Chosen Option : --

Q.27 Select the correct passive form of the given sentence.

The locusts have attacked the crops in Western India.

- Ans
- 1. The crops in Western India have attacked the locusts.
 - 2. The locusts in Western India have been attacked by the crops.
 - 3. The crops in Western India were attacked by the locusts.
 - 4. The crops in Western India have been attacked by the locusts.

Question ID : 81616111265
Status : Answered
Chosen Option : 2

Q.28 In the given sentence, identify the segment that contains a grammatical error.

The backbone in the human body is also called as the vertebral column.

- Ans
- 1. is also called
 - 2. The backbone
 - 3. in the human body
 - 4. as the vertebral column

Question ID : 81616111467
Status : Answered
Chosen Option : 1

Q.29 Select the most appropriate meaning of the given idiom.

To get cold feet

- Ans
- 1. To dip one's feet in cold water
 - 2. Not to think clearly
 - 3. To get frost bite in winter
 - 4. To become afraid to do something

Question ID : 81616112160
Status : Answered
Chosen Option : 1

Q.30 Select the most appropriate meaning of the given idiom.

Under the weather

- Ans 1. Not feeling well
 2. Damp and wet
 3. Bright and sunny
 4. In good weather

Question ID : 81616112157
Status : Answered
Chosen Option : 1

Q.31 Select the most appropriate meaning of the given idiom.

To make up for

- Ans 1. to prepare or arrange something
 2. to praise someone to get something for oneself
 3. to replace something that is lost or damaged
 4. to help to make something possible

Question ID : 81616111541
Status : Answered
Chosen Option : 4

Q.32 In the sentence identify the segment that contains a grammatical error.

He told me that he don't like people who are not genuinely interested in helping others.

- Ans 1. told me that
 2. are not
 3. interested in helping
 4. he don't like

Question ID : 81616111874
Status : Not Answered
Chosen Option : --

Q.33 Select the option that expresses the given sentence in reported speech.

Ranjan said to his boss, "Will you promote me by the end of this year?"

- Ans 1. Ranjan asked to his boss if he will promote him by the end of that year.
 2. Ranjan asked his boss if he would promote him by the end of this year.
 3. Ranjan asked his boss that if he will promote him by the end of this year.
 4. Ranjan asked his boss if he would promote him by the end of that year.

Question ID : 81616110866
Status : Answered
Chosen Option : 3

Q.34 Select the correct direct narration of the given sentence.

The manager suggested to his team that they postpone the meeting until all of them had the information required.

- Ans
- 1. The team told the manager, "Let us postpone the meeting until all of us have the information required."
 - 2. The manager told his team, "Postpone the meeting until all of you have the information required."
 - 3. The manager asked his team, "We will postpone the meeting until all of you have the required information."
 - 4. The manager said to his team, "Let us postpone the meeting until all of you have the information required."

Question ID : 8161611488

Status : Not Answered

Chosen Option : --

Q.35 Select the most appropriate option to improve the underlined segment in the given sentence. If there is no need to improve it, select 'No improvement required'.

He is no clever to make sound business decisions.

- Ans
- 1. No improvement required
 - 2. not clever to be making
 - 3. not enough clever to make
 - 4. not clever enough to make

Question ID : 81616110882

Status : Answered

Chosen Option : 3

Q.36 Select the correct active form of the given sentence.

Everyone was charmed by her fine dance performance.

- Ans
- 1. Her fine dance performance was charming to everyone.
 - 2. Her fine dance performance has charmed everyone.
 - 3. Her fine dance performance will charm everyone.
 - 4. Her fine dance performance charmed everyone.

Question ID : 8161611271

Status : Not Answered

Chosen Option : --

Q.37 Fill in the blank with the most appropriate word.

Gravity not only causes bodies to fall but also _____ their speed.

- Ans
- 1. causes
 - 2. adds
 - 3. increases
 - 4. decreases

Question ID : 8161611500

Status : Answered

Chosen Option : 3

Q.38 Select the option that expresses the given sentence in active voice.

Let a strict eye be kept on rumour mongers.

- Ans
- 1. Rumour mongers should keep a strict eye.
 - 2. Let rumour mongers keep a strict eye.
 - 3. Keep a strict eye on rumour mongers.
 - 4. You should have kept a strict eye on rumour mongers.

Question ID : 81616110862
Status : Not Answered
Chosen Option : --

Q.39 The following sentence has been split into four segments. Identify the segment that contains a grammatical error.

In about two months, / our family will be / leaving to Australia / to settle there.

- Ans
- 1. In about two months
 - 2. to settle there
 - 3. our family will be
 - 4. leaving to Australia

Question ID : 81616112076
Status : Answered
Chosen Option : 3

Q.40 Given here are four sentences. The first sentence is in correct order, while the rest of the sentences are jumbled. Pick the option that gives their correct order.

- A. He dipped his fingers in the milk and thrust them into the fawn's soft wet mouth.
- B. So, he dipped his fingers again and let the fawn suck them.
- C. When he withdrew them, the fawn bleated frantically.
- D. It sucked greedily.

- Ans
- 1. ACBD
 - 2. ADCB
 - 3. ABCD
 - 4. ABDC

Question ID : 81616111530
Status : Not Answered
Chosen Option : --

Q.41 Select the most appropriate option to substitute the underlined segment in the given sentence. If no substitution is required, select 'No substitution'.

Some people fear of groups results in long-silences or excessive talking.

- Ans
- 1. Some people's
 - 2. Some of the people
 - 3. No substitution
 - 4. Some peoples'

Question ID : 81616111494
Status : Answered
Chosen Option : 2

Q.42 Select the most appropriate synonym of the given word.

Batter

- Ans 1. Struggle
 2. Beat
 3. Clash
 4. Fight

Question ID : 81616112149
Status : Answered
Chosen Option : 1

Q.43 Identify the segment in the sentence which contains a grammatical error.

More than 30 people were arresting on suspicion of terrorism offences in Jammu and Kashmir.

- Ans 1. on suspicion of terrorism offences
 2. More than 30 people
 3. were arresting
 4. in Jammu and Kashmir

Question ID : 8161611254
Status : Answered
Chosen Option : 1

Q.44 Select the most appropriate option to substitute the underlined segment in the given sentence. If no substitution is required, select 'No substitution'.

Impending natural disasters produce us constant worry.

- Ans 1. instill
 2. No substitution
 3. cause
 4. provoke

Question ID : 8161611498
Status : Answered
Chosen Option : 4

Q.45 In the given sentence, identify the segment which contains a grammatical error.

The migrating labourers were served hot meals for every town or village on their way.

- Ans 1. for every town
 2. migrating labourers
 3. were served
 4. on their way

Question ID : 8161611665
Status : Answered
Chosen Option : 3

Q.46 Select the most appropriate synonym of the given word.

Carnage

- Ans
- 1. Revelry
 - 2. Plague
 - 3. Lust
 - 4. Slaughter

Question ID : 81616112150
Status : Answered
Chosen Option : 4

Q.47 Identify the segment in the sentence which contains a grammatical error.

A writer who wrote this book has been selected for this year's literature award.

- Ans
- 1. for this year's literature award
 - 2. A writer who
 - 3. wrote this book
 - 4. has been selected

Question ID : 81616111053
Status : Not Answered
Chosen Option : --

Q.48 Select the most appropriate synonym of the given word.

HUGE

- Ans
- 1. embrace
 - 2. big
 - 3. small
 - 4. far

Question ID : 81616111531
Status : Answered
Chosen Option : 1

Q.49 Select the most appropriate option to improve the underlined segment in the given sentence. If there is no need to improve it, select 'No improvement required'.

He waves to me whoever he sees me at the window.

- Ans
- 1. No improvement required
 - 2. wherever
 - 3. whatever
 - 4. whenever

Question ID : 81616110874
Status : Answered
Chosen Option : 4

Q.50 Select the most appropriate ANTONYM of the given word.

Hospitable

- Ans 1. Rude
 2. Sick
 3. Gracious
 4. Cordial

Question ID : 81616112155
Status : Answered
Chosen Option : 2

Q.51 Select the most appropriate meaning of the given idiom.

To cut corners

- Ans 1. To reduce corners in a building to save space
 2. To remove sharp edges in furniture
 3. To cut the corners of a cloth for stitching
 4. To save money and economise

Question ID : 81616112159
Status : Answered
Chosen Option : 3

Q.52 Select the correct active form of the given sentence.

Hundreds of villages in West Bengal have been devastated by Cyclone Amphan.

- Ans 1. Cyclone Amphan is devastating hundreds of villages in West Bengal.
 2. Cyclone Amphan has devastated hundreds of villages in West Bengal.
 3. Cyclone Amphan has been devastating hundreds of villages in West Bengal.
 4. Cyclone Amphan was devastating hundreds of villages in West Bengal.

Question ID : 81616111064
Status : Not Answered
Chosen Option : --

Q.53 Select the option that expresses the given sentence in direct speech.

The officer asked the accountant why the accounts had not been reconciled.

- Ans 1. The officer said to the accountant, "Why have the accounts not been reconciled?"
 2. The officer said to the accountant, "Why the accounts have not been reconciled?"
 3. The officer said to the accountant, "Why have the accounts not being reconciled?"
 4. The officer said to the accountant, "Why the accounts had not been reconciled?"

Question ID : 81616110872
Status : Answered
Chosen Option : 4

Q.54 Select the most appropriate synonym of the given word.

SUPPORTING

- Ans 1. applauding
 2. disagreeing
 3. arguing
 4. agreeing

Question ID : 8161611533
Status : Answered
Chosen Option : 1

Q.55 In the given sentence, identify the segment which contains a grammatical error.

The staff is being advise to maintain distance while seated in office.

- Ans 1. in office
 2. is being advise
 3. to maintain
 4. The staff

Question ID : 8161611667
Status : Answered
Chosen Option : 2

Q.56 Select the most appropriate option to substitute the underlined segment in the given sentence. If no substitution is required, select 'No substitution'.

I had no choice but from agree to the terms of the contract.

- Ans 1. but was
 2. but to
 3. No substitution
 4. but for

Question ID : 8161611700
Status : Answered
Chosen Option : 3

Q.57 Select the correct direct narration of the given sentence.

I told my driver that it was raining heavily and requested him to drive slowly.

- Ans 1. "It is raining heavily. Please drive slowly," I said to my driver.
 2. I said to my driver, "It was raining heavily. Can you please drive slowly?"
 3. I told my driver, "It has been raining heavily and I am requesting to drive slowly."
 4. "It is raining heavily," I told my driver and asked, "Would you drive slowly?"

Question ID : 8161611896
Status : Not Answered
Chosen Option : --

Q.58 Select the option that expresses the given sentence in passive voice.

His employer trusts him completely.

- Ans
- 1. He is completely trusted by his employer.
 - 2. His employer was completely trusted by him.
 - 3. He has been completely trusted by his employer.
 - 4. He was completely trusted by his employer.

Question ID : 81616110854

Status : Answered

Chosen Option : 2

Q.59 Given here are four sentences. The first sentence is in correct order, while the rest of the sentences are jumbled. Pick the option that gives their correct order.

- A. The Rajasthani men's style of dressing is very classical.
- B. How the pagri is tied varies according to the region the people belong to.
- C. It is commonly known as 'pagri' or 'safa'.
- D. The turban forms the most traditional form of their dress.

- Ans
- 1. ACDB
 - 2. ACBD
 - 3. ABCD
 - 4. ADCB

Question ID : 81616110911

Status : Not Answered

Chosen Option : --

Q.60 Select the most appropriate option to fill in the blank.

The tiger is gradually _____ a rare species.

- Ans
- 1. became
 - 2. becoming
 - 3. become
 - 4. has become

Question ID : 81616110886

Status : Answered

Chosen Option : 3

Q.61 Select the most appropriate ANTONYM of the given word.

Negligent

- Ans
- 1. Calm
 - 2. Careful
 - 3. Composed
 - 4. Careless

Question ID : 81616112152

Status : Answered

Chosen Option : 3

Q.62 Select the most appropriate option to substitute the underlined segment in the given sentence. If no substitution is required, select 'No substitution required'.

Any of the boy in my team are very intelligent.

- Ans
- 1. Some of boys
 - 2. No substitution required
 - 3. All the boy
 - 4. Some of the boys

Question ID : 8161611906

Status : Answered

Chosen Option : 3

Q.63 Identify the segment in the sentence which contains a grammatical error.

A heat wave is declare when the maximum temperature hits 45° Celsius or is above 40° Celsius in summer.

- Ans
- 1. is declare
 - 2. or is above
 - 3. A heat wave
 - 4. when the

Question ID : 8161611260

Status : Answered

Chosen Option : 1

Q.64 Select the correct active voice of the given sentence.

Panic has been caused by the sudden lockdown.

- Ans
- 1. The sudden lockdown is causing panic.
 - 2. Panic is being caused by the sudden lockdown.
 - 3. The sudden lockdown has caused panic.
 - 4. The sudden lockdown is the cause of panic.

Question ID : 8161611885

Status : Not Answered

Chosen Option : --

Q.65 Select the correct indirect form of the given sentence.

Raghav said, "You should take a week to complete the job. In case you don't, just let me know how much time you will need."

- Ans
- 1. Raghav was saying that I should take a week to complete the job. He was also saying that in case I didn't, I should let him know how much time I would need.
 - 2. Raghav said that I should take a week to have completed the job. He further said that in case I couldn't, I should let him know how much time I needed.
 - 3. Raghav suggested that he would take a week to complete the job. He further said that in case he didn't, I should let him know how much time I would need.
 - 4. Raghav suggested that I should take a week to complete the job. He further said that in case I didn't, I should let him know how much time I would need.

Question ID : 8161611690

Status : Answered

Chosen Option : 2

Comprehension:

In the given passage some words have been deleted. Fill in the blanks with the help of the options given. Select the most appropriate option for each number.

One day, my six-year-old sister (1)_____ us which career she should (2)_____ for. My father suggested (3)_____ she should become a doctor, (4)_____ my mother said she could (5)_____ a newspaper reporter. I (6)_____ she would make a (7)_____ teacher. After a brief (8)_____ my sister declared, "I will become (9)_____ actress. Then I will get an (10)_____ to play all these roles."

SubQuestion No : 66

Q.66 Select the most appropriate option to fill in blank no. 1.

- Ans 1. asked
 2. asks
 3. asking
 4. ask

Question ID : 81616110890

Status : Answered

Chosen Option : 1

Comprehension:

In the given passage some words have been deleted. Fill in the blanks with the help of the options given. Select the most appropriate option for each number.

One day, my six-year-old sister (1)_____ us which career she should (2)_____ for. My father suggested (3)_____ she should become a doctor, (4)_____ my mother said she could (5)_____ a newspaper reporter. I (6)_____ she would make a (7)_____ teacher. After a brief (8)_____ my sister declared, "I will become (9)_____ actress. Then I will get an (10)_____ to play all these roles."

SubQuestion No : 67

Q.67 Select the most appropriate option to fill in blank no. 2.

- Ans 1. select
 2. pick
 3. opt
 4. choose

Question ID : 81616110891

Status : Answered

Chosen Option : 1

Comprehension:

In the given passage some words have been deleted. Fill in the blanks with the help of the options given. Select the most appropriate option for each number.

One day, my six-year-old sister (1)_____ us which career she should (2)_____ for. My father suggested (3)_____ she should become a doctor, (4)_____ my mother said she could (5)_____ a newspaper reporter. I (6)_____ she would make a (7)_____ teacher. After a brief (8)_____ my sister declared, "I will become (9)_____ actress. Then I will get an (10)_____ to play all these roles."

SubQuestion No : 68

Q.68 Select the most appropriate option to fill in blank no. 3.

- Ans 1. such
 2. that
 3. so
 4. this

Question ID : 81616110892

Status : Answered

Chosen Option : 1

Comprehension:

In the given passage some words have been deleted. Fill in the blanks with the help of the options given. Select the most appropriate option for each number.

One day, my six-year-old sister (1)_____ us which career she should (2)_____ for. My father suggested (3)_____ she should become a doctor, (4)_____ my mother said she could (5)_____ a newspaper reporter. I (6)_____ she would make a (7)_____ teacher. After a brief (8)_____ my sister declared, "I will become (9)_____ actress. Then I will get an (10)_____ to play all these roles."

SubQuestion No : 69

Q.69 Select the most appropriate option to fill in blank no. 4.

- Ans 1. while
 2. why
 3. what
 4. where

Question ID : 81616110893

Status : Answered

Chosen Option : 1

Comprehension:

In the given passage some words have been deleted. Fill in the blanks with the help of the options given. Select the most appropriate option for each number.

One day, my six-year-old sister (1)_____ us which career she should (2)_____ for. My father suggested (3)_____ she should become a doctor, (4)_____ my mother said she could (5)_____ a newspaper reporter. I (6)_____ she would make a (7)_____ teacher. After a brief (8)_____ my sister declared, "I will become (9)_____ actress. Then I will get an (10)_____ to play all these roles."

SubQuestion No : 70

Q.70 Select the most appropriate option to fill in blank no. 5.

- Ans 1. evolve
 2. become
 3. develop
 4. assume

Question ID : 81616110894

Status : Answered

Chosen Option : 2

Comprehension:

In the given passage some words have been deleted. Fill in the blanks with the help of the options given. Select the most appropriate option for each number.

One day, my six-year-old sister (1)_____ us which career she should (2)_____ for. My father suggested (3)_____ she should become a doctor, (4)_____ my mother said she could (5)_____ a newspaper reporter. I (6)_____ she would make a (7)_____ teacher. After a brief (8)_____ my sister declared, "I will become (9)_____ actress. Then I will get an (10)_____ to play all these roles."

SubQuestion No : 71

Q.71 Select the most appropriate option to fill in blank no. 6.

- Ans 1. proposed
 2. regarded
 3. believed
 4. considered

Question ID : 81616110895

Status : Answered

Chosen Option : 4

Comprehension:

In the given passage some words have been deleted. Fill in the blanks with the help of the options given. Select the most appropriate option for each number.

One day, my six-year-old sister (1)_____ us which career she should (2)_____ for. My father suggested (3)_____ she should become a doctor, (4)_____ my mother said she could (5)_____ a newspaper reporter. I (6) _____ she would make a (7)_____ teacher. After a brief (8)_____ my sister declared, "I will become (9)_____ actress. Then I will get an (10)_____ to play all these roles."

SubQuestion No : 72

Q.72 Select the most appropriate option to fill in blank no. 7.

- Ans 1. able
 2. fine
 3. ripe
 4. sure

Question ID : 81616110896

Status : Answered

Chosen Option : 4

Comprehension:

In the given passage some words have been deleted. Fill in the blanks with the help of the options given. Select the most appropriate option for each number.

One day, my six-year-old sister (1)_____ us which career she should (2)_____ for. My father suggested (3)_____ she should become a doctor, (4)_____ my mother said she could (5)_____ a newspaper reporter. I (6) _____ she would make a (7)_____ teacher. After a brief (8)_____ my sister declared, "I will become (9)_____ actress. Then I will get an (10)_____ to play all these roles."

SubQuestion No : 73

Q.73 Select the most appropriate option to fill in blank no. 8.

- Ans 1. space
 2. peace
 3. silence
 4. stop

Question ID : 81616110897

Status : Answered

Chosen Option : 3

Comprehension:

In the given passage some words have been deleted. Fill in the blanks with the help of the options given. Select the most appropriate option for each number.

One day, my six-year-old sister (1)_____ us which career she should (2)_____ for. My father suggested (3)_____ she should become a doctor, (4)_____ my mother said she could (5)_____ a newspaper reporter. I (6)_____ she would make a (7)_____ teacher. After a brief (8)_____ my sister declared, "I will become (9)_____ actress. Then I will get an (10)_____ to play all these roles."

SubQuestion No : 74

Q.74 Select the most appropriate option to fill in blank no. 9.

- Ans
- 1. one
 - 2. the
 - 3. an
 - 4. a

Question ID : 81616110898

Status : Answered

Chosen Option : 1

Comprehension:

In the given passage some words have been deleted. Fill in the blanks with the help of the options given. Select the most appropriate option for each number.

One day, my six-year-old sister (1)_____ us which career she should (2)_____ for. My father suggested (3)_____ she should become a doctor, (4)_____ my mother said she could (5)_____ a newspaper reporter. I (6)_____ she would make a (7)_____ teacher. After a brief (8)_____ my sister declared, "I will become (9)_____ actress. Then I will get an (10)_____ to play all these roles."

SubQuestion No : 75

Q.75 Select the most appropriate option to fill in blank no. 10.

- Ans
- 1. event
 - 2. example
 - 3. image
 - 4. opportunity

Question ID : 81616110899

Status : Answered

Chosen Option : 4

Comprehension:

In the following passage some words have been deleted. Fill in the blanks with the help of the alternatives given. Select the most appropriate option for each blank.

Another farmer's cotton harvest increased from 10 quintals to 14 quintals (1)_____ using pesticides and fertilizers on the suggestion (2)_____ the local agriculture extension officer. "I (3)_____ doubts as I was going for organic cotton for the (4)_____ time," he said, "But I saved eight thousand rupees per acre (5)_____ costs." He sold his cotton for almost seven lakhs, (6)_____ he wants to use for his daughter's studies and to (7)_____ a new house. Another farmer said he's got the first (8)'_____ crop' of his life this year. The 53-year-old used to grow red gram on his (9)_____ field. "But thanks to a government project, my village tank is full and I could (10)_____ paddy in the Rabi season." He reaped 66 quintals from his two acres.

SubQuestion No : 76

Q.76 Select the most appropriate option to fill in blank 1.

- Ans
- 1. for
 - 2. with
 - 3. over
 - 4. without

Question ID : 8161611516

Status : Answered

Chosen Option : 2

Comprehension:

In the following passage some words have been deleted. Fill in the blanks with the help of the alternatives given. Select the most appropriate option for each blank.

Another farmer's cotton harvest increased from 10 quintals to 14 quintals (1)_____ using pesticides and fertilizers on the suggestion (2)_____ the local agriculture extension officer. "I (3)_____ doubts as I was going for organic cotton for the (4)_____ time," he said, "But I saved eight thousand rupees per acre (5)_____ costs." He sold his cotton for almost seven lakhs, (6)_____ he wants to use for his daughter's studies and to (7)_____ a new house. Another farmer said he's got the first (8)'_____ crop' of his life this year. The 53-year-old used to grow red gram on his (9)_____ field. "But thanks to a government project, my village tank is full and I could (10)_____ paddy in the Rabi season." He reaped 66 quintals from his two acres.

SubQuestion No : 77

Q.77 Select the most appropriate option to fill in blank 2.

- Ans
- 1. to
 - 2. for
 - 3. with
 - 4. of

Question ID : 8161611517

Status : Answered

Chosen Option : 1

Comprehension:

In the following passage some words have been deleted. Fill in the blanks with the help of the alternatives given. Select the most appropriate option for each blank.

Another farmer's cotton harvest increased from 10 quintals to 14 quintals (1)_____ using pesticides and fertilizers on the suggestion (2)_____ the local agriculture extension officer. "I (3)_____ doubts as I was going for organic cotton for the (4)_____ time," he said, "But I saved eight thousand rupees per acre (5)_____ costs." He sold his cotton for almost seven lakhs, (6)_____ he wants to use for his daughter's studies and to (7)_____ a new house. Another farmer said he's got the first (8)'_____ crop' of his life this year. The 53-year-old used to grow red gram on his (9)_____ field. "But thanks to a government project, my village tank is full and I could (10)_____ paddy in the Rabi season." He reaped 66 quintals from his two acres.

SubQuestion No : 78

Q.78 Select the most appropriate option to fill in blank 3.

- Ans
- 1. didn't have
 - 2. have had
 - 3. have
 - 4. had

Question ID : 8161611518

Status : Answered

Chosen Option : 1

Comprehension:

In the following passage some words have been deleted. Fill in the blanks with the help of the alternatives given. Select the most appropriate option for each blank.

Another farmer's cotton harvest increased from 10 quintals to 14 quintals (1)_____ using pesticides and fertilizers on the suggestion (2)_____ the local agriculture extension officer. "I (3)_____ doubts as I was going for organic cotton for the (4)_____ time," he said, "But I saved eight thousand rupees per acre (5)_____ costs." He sold his cotton for almost seven lakhs, (6)_____ he wants to use for his daughter's studies and to (7)_____ a new house. Another farmer said he's got the first (8)'_____ crop' of his life this year. The 53-year-old used to grow red gram on his (9)_____ field. "But thanks to a government project, my village tank is full and I could (10)_____ paddy in the Rabi season." He reaped 66 quintals from his two acres.

SubQuestion No : 79

Q.79 Select the most appropriate option to fill in blank 4.

- Ans
- 1. last
 - 2. first
 - 3. next
 - 4. future

Question ID : 8161611519

Status : Answered

Chosen Option : 2

Comprehension:

In the following passage some words have been deleted. Fill in the blanks with the help of the alternatives given. Select the most appropriate option for each blank.

Another farmer's cotton harvest increased from 10 quintals to 14 quintals (1)_____ using pesticides and fertilizers on the suggestion (2)_____ the local agriculture extension officer. "I (3)_____ doubts as I was going for organic cotton for the (4)_____ time," he said, "But I saved eight thousand rupees per acre (5)_____ costs." He sold his cotton for almost seven lakhs, (6)_____ he wants to use for his daughter's studies and to (7)_____ a new house. Another farmer said he's got the first (8)'_____ crop' of his life this year. The 53-year-old used to grow red gram on his (9)_____ field. "But thanks to a government project, my village tank is full and I could (10)_____ paddy in the Rabi season." He reaped 66 quintals from his two acres.

SubQuestion No : 80

Q.80 Select the most appropriate option to fill in blank 5.

- Ans 1. by
 2. on
 3. from
 4. as

Question ID : 8161611520

Status : Not Answered

Chosen Option : --

Comprehension:

In the following passage some words have been deleted. Fill in the blanks with the help of the alternatives given. Select the most appropriate option for each blank.

Another farmer's cotton harvest increased from 10 quintals to 14 quintals (1)_____ using pesticides and fertilizers on the suggestion (2)_____ the local agriculture extension officer. "I (3)_____ doubts as I was going for organic cotton for the (4)_____ time," he said, "But I saved eight thousand rupees per acre (5)_____ costs." He sold his cotton for almost seven lakhs, (6)_____ he wants to use for his daughter's studies and to (7)_____ a new house. Another farmer said he's got the first (8)'_____ crop' of his life this year. The 53-year-old used to grow red gram on his (9)_____ field. "But thanks to a government project, my village tank is full and I could (10)_____ paddy in the Rabi season." He reaped 66 quintals from his two acres.

SubQuestion No : 81

Q.81 Select the most appropriate option to fill in blank 6.

- Ans 1. these
 2. which
 3. when
 4. those

Question ID : 8161611521

Status : Answered

Chosen Option : 3

Comprehension:

In the following passage some words have been deleted. Fill in the blanks with the help of the alternatives given. Select the most appropriate option for each blank.

Another farmer's cotton harvest increased from 10 quintals to 14 quintals (1)_____ using pesticides and fertilizers on the suggestion (2)_____ the local agriculture extension officer. "I (3)_____ doubts as I was going for organic cotton for the (4)_____ time," he said, "But I saved eight thousand rupees per acre (5)_____ costs." He sold his cotton for almost seven lakhs, (6)_____ he wants to use for his daughter's studies and to (7)_____ a new house. Another farmer said he's got the first (8)'_____ crop' of his life this year. The 53-year-old used to grow red gram on his (9)_____ field. "But thanks to a government project, my village tank is full and I could (10)_____ paddy in the Rabi season." He reaped 66 quintals from his two acres.

SubQuestion No : 82

Q.82 Select the most appropriate option to fill in blank 7.

- Ans 1. establish
 2. build
 3. develop
 4. create

Question ID : 8161611522

Status : Answered

Chosen Option : 2

Comprehension:

In the following passage some words have been deleted. Fill in the blanks with the help of the alternatives given. Select the most appropriate option for each blank.

Another farmer's cotton harvest increased from 10 quintals to 14 quintals (1)_____ using pesticides and fertilizers on the suggestion (2)_____ the local agriculture extension officer. "I (3)_____ doubts as I was going for organic cotton for the (4)_____ time," he said, "But I saved eight thousand rupees per acre (5)_____ costs." He sold his cotton for almost seven lakhs, (6)_____ he wants to use for his daughter's studies and to (7)_____ a new house. Another farmer said he's got the first (8)'_____ crop' of his life this year. The 53-year-old used to grow red gram on his (9)_____ field. "But thanks to a government project, my village tank is full and I could (10)_____ paddy in the Rabi season." He reaped 66 quintals from his two acres.

SubQuestion No : 83

Q.83 Select the most appropriate option to fill in blank 8.

- Ans 1. high
 2. good
 3. terrible
 4. low

Question ID : 8161611523

Status : Answered

Chosen Option : 2

Comprehension:

In the following passage some words have been deleted. Fill in the blanks with the help of the alternatives given. Select the most appropriate option for each blank.

Another farmer's cotton harvest increased from 10 quintals to 14 quintals (1)_____ using pesticides and fertilizers on the suggestion (2)_____ the local agriculture extension officer. "I (3)_____ doubts as I was going for organic cotton for the (4)_____ time," he said, "But I saved eight thousand rupees per acre (5)_____ costs." He sold his cotton for almost seven lakhs, (6)_____ he wants to use for his daughter's studies and to (7)_____ a new house. Another farmer said he's got the first (8)'_____ crop' of his life this year. The 53-year-old used to grow red gram on his (9)_____ field. "But thanks to a government project, my village tank is full and I could (10)_____ paddy in the Rabi season." He reaped 66 quintals from his two acres.

SubQuestion No : 84

Q.84 Select the most appropriate option to fill in blank 9.

- Ans
- 1. drenched
 - 2. spoiled
 - 3. unirrigated
 - 4. flooded

Question ID : 8161611524

Status : Answered

Chosen Option : 2

Comprehension:

In the following passage some words have been deleted. Fill in the blanks with the help of the alternatives given. Select the most appropriate option for each blank.

Another farmer's cotton harvest increased from 10 quintals to 14 quintals (1)_____ using pesticides and fertilizers on the suggestion (2)_____ the local agriculture extension officer. "I (3)_____ doubts as I was going for organic cotton for the (4)_____ time," he said, "But I saved eight thousand rupees per acre (5)_____ costs." He sold his cotton for almost seven lakhs, (6)_____ he wants to use for his daughter's studies and to (7)_____ a new house. Another farmer said he's got the first (8)'_____ crop' of his life this year. The 53-year-old used to grow red gram on his (9)_____ field. "But thanks to a government project, my village tank is full and I could (10)_____ paddy in the Rabi season." He reaped 66 quintals from his two acres.

SubQuestion No : 85

Q.85 Select the most appropriate option to fill in blank 10.

- Ans
- 1. support
 - 2. cultivate
 - 3. develop
 - 4. buy

Question ID : 8161611525

Status : Answered

Chosen Option : 3

Comprehension:

Read the given passage and answer the questions that follow.

Difficult times could create feelings of anxiety, insecurity, and fear. As we navigate through undesirable situations and uncertainties, we find that negativities surrounding the problems consume our mind. It is in those times that we have to exert ourselves to change our perspective and adopt a more positive and solution-driven attitude. Wise people have always chosen to leverage adversities as opportunities for growth and progress, rather than succumb to negative thought patterns. Saint Kabir described how different people respond when challenged by problems: "Gold, virtuous people and saints are resilient; you may break them a hundred times and yet they will re-join. In contrast, negative people and clay pots are fragile; once shattered, they are broken forever."

The distinguishing feature of the successful is that they have a mind-set that enables them to remain positive in the face of adversity and even utilise the negative situation for their benefit. The eagle can teach us a few lessons on this. When the storm starts blowing, it does not cower down before it. It flies to a higher point and waits for the wind to blow over. When the storm sets in, the eagle spreads its wings and uses the draft of the wind to rise higher and higher in the sky. It does not run away from the storm, rather it uses the storm to its advantage. While the storm rages below, the eagle soars above it.

The winning attitude to overcome despair and stress is to realise that adversities have opportunities inherent in them, and opportunities do not come without problems. Hence, difficulties and obstacles have a positive side to them as they make us grow from within. A gem gets polished with friction. The finest steel is produced by putting it in fire. Similarly, the more hardships we face, the stronger we become.

SubQuestion No : 86

Q.86 When there is a storm, an eagle _____

- Ans**
- 1. flies high above it, using its force
 - 2. gets scared and hides to save itself
 - 3. uses it to fly away to safety
 - 4. waits for it to end, then starts flying

Question ID : 8161611767

Status : Not Answered

Chosen Option : --

Comprehension:

Read the given passage and answer the questions that follow.

Difficult times could create feelings of anxiety, insecurity, and fear. As we navigate through undesirable situations and uncertainties, we find that negativities surrounding the problems consume our mind. It is in those times that we have to exert ourselves to change our perspective and adopt a more positive and solution-driven attitude. Wise people have always chosen to leverage adversities as opportunities for growth and progress, rather than succumb to negative thought patterns. Saint Kabir described how different people respond when challenged by problems: "Gold, virtuous people and saints are resilient; you may break them a hundred times and yet they will re-join. In contrast, negative people and clay pots are fragile; once shattered, they are broken forever."

The distinguishing feature of the successful is that they have a mind-set that enables them to remain positive in the face of adversity and even utilise the negative situation for their benefit. The eagle can teach us a few lessons on this. When the storm starts blowing, it does not cower down before it. It flies to a higher point and waits for the wind to blow over. When the storm sets in, the eagle spreads its wings and uses the draft of the wind to rise higher and higher in the sky. It does not run away from the storm, rather it uses the storm to its advantage. While the storm rages below, the eagle soars above it.

The winning attitude to overcome despair and stress is to realise that adversities have opportunities inherent in them, and opportunities do not come without problems. Hence, difficulties and obstacles have a positive side to them as they make us grow from within. A gem gets polished with friction. The finest steel is produced by putting it in fire. Similarly, the more hardships we face, the stronger we become.

SubQuestion No : 87

Q.87 Which of the following is NOT a message that the passage gives us?

- Ans
- 1. Adversities have opportunities as well as obstacles inherent in them.
 - 2. Those who are positive are fragile and can be easily shattered by difficulties.
 - 3. Difficulties enable us to become stronger as we learn to face them.
 - 4. We have to change our view point and adopt a more positive and solution-driven attitude towards difficulties.

Question ID : 8161611768

Status : Answered

Chosen Option : 3

Comprehension:

Read the given passage and answer the questions that follow.

Difficult times could create feelings of anxiety, insecurity, and fear. As we navigate through undesirable situations and uncertainties, we find that negativities surrounding the problems consume our mind. It is in those times that we have to exert ourselves to change our perspective and adopt a more positive and solution-driven attitude. Wise people have always chosen to leverage adversities as opportunities for growth and progress, rather than succumb to negative thought patterns. Saint Kabir described how different people respond when challenged by problems: "Gold, virtuous people and saints are resilient; you may break them a hundred times and yet they will re-join. In contrast, negative people and clay pots are fragile; once shattered, they are broken forever."

The distinguishing feature of the successful is that they have a mind-set that enables them to remain positive in the face of adversity and even utilise the negative situation for their benefit. The eagle can teach us a few lessons on this. When the storm starts blowing, it does not cower down before it. It flies to a higher point and waits for the wind to blow over. When the storm sets in, the eagle spreads its wings and uses the draft of the wind to rise higher and higher in the sky. It does not run away from the storm, rather it uses the storm to its advantage. While the storm rages below, the eagle soars above it.

The winning attitude to overcome despair and stress is to realise that adversities have opportunities inherent in them, and opportunities do not come without problems. Hence, difficulties and obstacles have a positive side to them as they make us grow from within. A gem gets polished with friction. The finest steel is produced by putting it in fire. Similarly, the more hardships we face, the stronger we become.

SubQuestion No : 88

Q.88 Which of the following is an ideal way of handling a difficult situation?

- Ans
- 1. Thinking deeply about the impact of adversities
 - 2. Becoming overcome by stress and negativity
 - 3. Moving away from difficulties
 - 4. Making the best use of a situation to your advantage

Question ID : 8161611766

Status : Not Answered

Chosen Option : --

Comprehension:

Read the given passage and answer the questions that follow.

Difficult times could create feelings of anxiety, insecurity, and fear. As we navigate through undesirable situations and uncertainties, we find that negativities surrounding the problems consume our mind. It is in those times that we have to exert ourselves to change our perspective and adopt a more positive and solution-driven attitude. Wise people have always chosen to leverage adversities as opportunities for growth and progress, rather than succumb to negative thought patterns. Saint Kabir described how different people respond when challenged by problems: "Gold, virtuous people and saints are resilient; you may break them a hundred times and yet they will re-join. In contrast, negative people and clay pots are fragile; once shattered, they are broken forever."

The distinguishing feature of the successful is that they have a mind-set that enables them to remain positive in the face of adversity and even utilise the negative situation for their benefit. The eagle can teach us a few lessons on this. When the storm starts blowing, it does not cower down before it. It flies to a higher point and waits for the wind to blow over. When the storm sets in, the eagle spreads its wings and uses the draft of the wind to rise higher and higher in the sky. It does not run away from the storm, rather it uses the storm to its advantage. While the storm rages below, the eagle soars above it.

The winning attitude to overcome despair and stress is to realise that adversities have opportunities inherent in them, and opportunities do not come without problems. Hence, difficulties and obstacles have a positive side to them as they make us grow from within. A gem gets polished with friction. The finest steel is produced by putting it in fire. Similarly, the more hardships we face, the stronger we become.

SubQuestion No : 89

Q.89 Saint Kabir believed that saintly people:

- Ans**
- 1. can regain their strength easily
 - 2. can be broken easily
 - 3. are not willing to suffer a hundred times
 - 4. can be overcome by fear easily

Question ID : 8161611765

Status : Answered

Chosen Option : 3

Comprehension:

Read the given passage and answer the questions that follow.

Difficult times could create feelings of anxiety, insecurity, and fear. As we navigate through undesirable situations and uncertainties, we find that negativities surrounding the problems consume our mind. It is in those times that we have to exert ourselves to change our perspective and adopt a more positive and solution-driven attitude. Wise people have always chosen to leverage adversities as opportunities for growth and progress, rather than succumb to negative thought patterns. Saint Kabir described how different people respond when challenged by problems: "Gold, virtuous people and saints are resilient; you may break them a hundred times and yet they will re-join. In contrast, negative people and clay pots are fragile; once shattered, they are broken forever."

The distinguishing feature of the successful is that they have a mind-set that enables them to remain positive in the face of adversity and even utilise the negative situation for their benefit. The eagle can teach us a few lessons on this. When the storm starts blowing, it does not cower down before it. It flies to a higher point and waits for the wind to blow over. When the storm sets in, the eagle spreads its wings and uses the draft of the wind to rise higher and higher in the sky. It does not run away from the storm, rather it uses the storm to its advantage. While the storm rages below, the eagle soars above it.

The winning attitude to overcome despair and stress is to realise that adversities have opportunities inherent in them, and opportunities do not come without problems. Hence, difficulties and obstacles have a positive side to them as they make us grow from within. A gem gets polished with friction. The finest steel is produced by putting it in fire. Similarly, the more hardships we face, the stronger we become.

SubQuestion No : 90

Q.90 As per the passage, when we face difficult times:

- Ans
- 1. our minds get overcome by negative thoughts
 - 2. we become passively engaged in overcoming them
 - 3. we start changing our views on life
 - 4. we look at them as opportunities for improvement

Question ID : 8161611764

Status : Not Answered

Chosen Option : --

Comprehension:

Read the following passage and answer the questions that follow.

Unlike its Nordic neighbors, Sweden decided early on in the pandemic to forgo lockdown in the hope of achieving broad immunity to the coronavirus. While social distancing was promoted, the government allowed bars, restaurants, salons, gyms and schools to stay open. Initially, Sweden saw death rates from Covid-19 that were similar to other European nations that had closed down their economies. But now, the Scandinavian nation's daily death toll per 1 million people is 8.71 compared to the United States' 4.59, according to online publication 'Our World in Data'. Sweden's mortality rate is the highest in Europe.

"I'd say it hasn't worked out so well," said Dr. George Rutherford, professor of epidemiology at the University of California, San Francisco. "I think the mortality in Norway is something like ten-fold lower. That's the real comparator." (Norway's daily death rate is less than .01 per 1 million people.)

"If you let this go or don't try very hard or go about it in somewhat of a more restrained way rather than we have here, this is the price you pay," Rutherford said. "Maybe it didn't hurt businesses, but you have twice the mortality rate of the United States. All those people who died were part of families and they were citizens and part of the fabric of Swedish society. And now they're gone because of a policy that hasn't worked out quite the way they thought it would."

Scientists estimate herd immunity for the coronavirus is reached when 70-90% of the population becomes immune to a virus, either by becoming infected or getting a protective vaccine.

Despite its relaxed response, Sweden is nowhere near to hitting that goal. Tests on 1,118 Stockholm residents carried out by Sweden's Public Health Agency over one week in late April showed that only 7.3% had developed the antibodies needed to stave off the disease.

"I think herd immunity is a long way off, if we ever reach it," Björn Olsen, a professor of infectious medicine at Uppsala University, told Reuters after the release of the antibody findings.

Rutherford said we can keep doing non-pharmaceutical interventions like contact tracing, mask wearing and isolation quarantines, but also develop drugs that work better treating people who already have the infection so they don't require critical care in a hospital.

SubQuestion No : 91

Q.91 Why did Sweden decide against having a lockdown in the country?

- Ans**
- 1. They hoped to achieve broad immunity to the corona virus.
 - 2. They had faith in their public healthcare system.
 - 3. They promoted social distancing.
 - 4. They did not want to disturb the economy of the country.

Question ID : 81616111348

Status : Answered

Chosen Option : 1

Comprehension:

Read the following passage and answer the questions that follow.

Unlike its Nordic neighbors, Sweden decided early on in the pandemic to forgo lockdown in the hope of achieving broad immunity to the coronavirus. While social distancing was promoted, the government allowed bars, restaurants, salons, gyms and schools to stay open. Initially, Sweden saw death rates from Covid-19 that were similar to other European nations that had closed down their economies. But now, the Scandinavian nation's daily death toll per 1 million people is 8.71 compared to the United States' 4.59, according to online publication 'Our World in Data'. Sweden's mortality rate is the highest in Europe.

"I'd say it hasn't worked out so well," said Dr. George Rutherford, professor of epidemiology at the University of California, San Francisco. "I think the mortality in Norway is something like ten-fold lower. That's the real comparator." (Norway's daily death rate is less than .01 per 1 million people.)

"If you let this go or don't try very hard or go about it in somewhat of a more restrained way rather than we have here, this is the price you pay," Rutherford said. "Maybe it didn't hurt businesses, but you have twice the mortality rate of the United States. All those people who died were part of families and they were citizens and part of the fabric of Swedish society. And now they're gone because of a policy that hasn't worked out quite the way they thought it would."

Scientists estimate herd immunity for the coronavirus is reached when 70-90% of the population becomes immune to a virus, either by becoming infected or getting a protective vaccine.

Despite its relaxed response, Sweden is nowhere near to hitting that goal. Tests on 1,118 Stockholm residents carried out by Sweden's Public Health Agency over one week in late April showed that only 7.3% had developed the antibodies needed to stave off the disease.

"I think herd immunity is a long way off, if we ever reach it," Björn Olsen, a professor of infectious medicine at Uppsala University, told Reuters after the release of the antibody findings.

Rutherford said we can keep doing non-pharmaceutical interventions like contact tracing, mask wearing and isolation quarantines, but also develop drugs that work better treating people who already have the infection so they don't require critical care in a hospital.

SubQuestion No : 92

Q.92 The death rate in Norway is:

- Ans**
- 1. 0.01 per 1 million people
 - 2. 1.01 per 1 million people
 - 3. 8.71 per 1 million people
 - 4. 4.59 per 1 million people

Question ID : 81616111350

Status : Answered

Chosen Option : 1

Comprehension:

Read the following passage and answer the questions that follow.

Unlike its Nordic neighbors, Sweden decided early on in the pandemic to forgo lockdown in the hope of achieving broad immunity to the coronavirus. While social distancing was promoted, the government allowed bars, restaurants, salons, gyms and schools to stay open. Initially, Sweden saw death rates from Covid-19 that were similar to other European nations that had closed down their economies. But now, the Scandinavian nation's daily death toll per 1 million people is 8.71 compared to the United States' 4.59, according to online publication 'Our World in Data'. Sweden's mortality rate is the highest in Europe.

"I'd say it hasn't worked out so well," said Dr. George Rutherford, professor of epidemiology at the University of California, San Francisco. "I think the mortality in Norway is something like ten-fold lower. That's the real comparator." (Norway's daily death rate is less than .01 per 1 million people.)

"If you let this go or don't try very hard or go about it in somewhat of a more restrained way rather than we have here, this is the price you pay," Rutherford said. "Maybe it didn't hurt businesses, but you have twice the mortality rate of the United States. All those people who died were part of families and they were citizens and part of the fabric of Swedish society. And now they're gone because of a policy that hasn't worked out quite the way they thought it would."

Scientists estimate herd immunity for the coronavirus is reached when 70-90% of the population becomes immune to a virus, either by becoming infected or getting a protective vaccine.

Despite its relaxed response, Sweden is nowhere near to hitting that goal. Tests on 1,118 Stockholm residents carried out by Sweden's Public Health Agency over one week in late April showed that only 7.3% had developed the antibodies needed to stave off the disease.

"I think herd immunity is a long way off, if we ever reach it," Björn Olsen, a professor of infectious medicine at Uppsala University, told Reuters after the release of the antibody findings.

Rutherford said we can keep doing non-pharmaceutical interventions like contact tracing, mask wearing and isolation quarantines, but also develop drugs that work better treating people who already have the infection so they don't require critical care in a hospital.

SubQuestion No : 93

Q.93 What was the result of having no lockdown in Sweden?

- Ans**
- 1. Sweden's mortality rate became the highest in Europe.
 - 2. Sweden's public health care system became more robust.
 - 3. The economy in Sweden flourished more than before.
 - 4. Sweden has achieved herd immunity against corona virus.

Question ID : 81616111349

Status : Answered

Chosen Option : 4

Comprehension:

Read the following passage and answer the questions that follow.

Unlike its Nordic neighbors, Sweden decided early on in the pandemic to forgo lockdown in the hope of achieving broad immunity to the coronavirus. While social distancing was promoted, the government allowed bars, restaurants, salons, gyms and schools to stay open. Initially, Sweden saw death rates from Covid-19 that were similar to other European nations that had closed down their economies. But now, the Scandinavian nation's daily death toll per 1 million people is 8.71 compared to the United States' 4.59, according to online publication 'Our World in Data'. Sweden's mortality rate is the highest in Europe.

"I'd say it hasn't worked out so well," said Dr. George Rutherford, professor of epidemiology at the University of California, San Francisco. "I think the mortality in Norway is something like ten-fold lower. That's the real comparator." (Norway's daily death rate is less than .01 per 1 million people.)

"If you let this go or don't try very hard or go about it in somewhat of a more restrained way rather than we have here, this is the price you pay," Rutherford said. "Maybe it didn't hurt businesses, but you have twice the mortality rate of the United States. All those people who died were part of families and they were citizens and part of the fabric of Swedish society. And now they're gone because of a policy that hasn't worked out quite the way they thought it would."

Scientists estimate herd immunity for the coronavirus is reached when 70-90% of the population becomes immune to a virus, either by becoming infected or getting a protective vaccine.

Despite its relaxed response, Sweden is nowhere near to hitting that goal. Tests on 1,118 Stockholm residents carried out by Sweden's Public Health Agency over one week in late April showed that only 7.3% had developed the antibodies needed to stave off the disease.

"I think herd immunity is a long way off, if we ever reach it," Björn Olsen, a professor of infectious medicine at Uppsala University, told Reuters after the release of the antibody findings.

Rutherford said we can keep doing non-pharmaceutical interventions like contact tracing, mask wearing and isolation quarantines, but also develop drugs that work better treating people who already have the infection so they don't require critical care in a hospital.

SubQuestion No : 94

Q.94 Which of the following statements is NOT true according to the passage?

- Ans**
- 1. The mortality rate in Sweden is twice the mortality rate of the United States.
 - 2. The government of Norway allowed bars, restaurants, salons, gyms and schools to stay open.
 - 3. According to scientific estimate, herd immunity for the corona virus is reached when 70-90% of the population becomes immune to the virus.
 - 4. In the beginning, Sweden's death rate was similar to other European nations who had locked down.

Question ID : 81616111352

Status : Answered

Chosen Option : 1

Comprehension:

Read the following passage and answer the questions that follow.

Unlike its Nordic neighbors, Sweden decided early on in the pandemic to forgo lockdown in the hope of achieving broad immunity to the coronavirus. While social distancing was promoted, the government allowed bars, restaurants, salons, gyms and schools to stay open. Initially, Sweden saw death rates from Covid-19 that were similar to other European nations that had closed down their economies. But now, the Scandinavian nation's daily death toll per 1 million people is 8.71 compared to the United States' 4.59, according to online publication 'Our World in Data'. Sweden's mortality rate is the highest in Europe.

"I'd say it hasn't worked out so well," said Dr. George Rutherford, professor of epidemiology at the University of California, San Francisco. "I think the mortality in Norway is something like ten-fold lower. That's the real comparator." (Norway's daily death rate is less than .01 per 1 million people.)

"If you let this go or don't try very hard or go about it in somewhat of a more restrained way rather than we have here, this is the price you pay," Rutherford said. "Maybe it didn't hurt businesses, but you have twice the mortality rate of the United States. All those people who died were part of families and they were citizens and part of the fabric of Swedish society. And now they're gone because of a policy that hasn't worked out quite the way they thought it would."

Scientists estimate herd immunity for the coronavirus is reached when 70-90% of the population becomes immune to a virus, either by becoming infected or getting a protective vaccine.

Despite its relaxed response, Sweden is nowhere near to hitting that goal. Tests on 1,118 Stockholm residents carried out by Sweden's Public Health Agency over one week in late April showed that only 7.3% had developed the antibodies needed to stave off the disease.

"I think herd immunity is a long way off, if we ever reach it," Björn Olsen, a professor of infectious medicine at Uppsala University, told Reuters after the release of the antibody findings.

Rutherford said we can keep doing non-pharmaceutical interventions like contact tracing, mask wearing and isolation quarantines, but also develop drugs that work better treating people who already have the infection so they don't require critical care in a hospital.

SubQuestion No : 95

Q.95 Select the option that correctly matches the words from the passage with their meanings.

- a. forgo 1. Prevent
- b. restrain 2. decline
- c. stave off 3. control

- Ans
- 1. a-1, b-3, c-2
 - 2. a-2, b-1, c-3
 - 3. a-2, b-3, c-1
 - 4. a-3, b-2, c-1

Question ID : 8161611351

Status : Not Answered

Chosen Option : --

Comprehension:

Read the given passage and answer the questions that follow.

As legend has it, Rome was founded in 753 B.C. by Romulus and Remus, twin sons of Mars, the god of war. They had been left to drown in a basket on the Tiber river by a king of a nearby region and were rescued by a she-wolf. The twins lived to defeat that king and founded their own city on the river's banks in 753 B.C. After killing his brother, Romulus became the first king of Rome, which is named after him. A line of Sabine, Latin and Etruscan (earlier Italian civilisations) kings followed in a non-hereditary succession.

Rome's era as a monarchy ended in 509 B.C. with the overthrow of its seventh king, Lucius Tarquinius Superbus, whom ancient historians portrayed as cruel and tyrannical, compared to his benevolent predecessors. Rome now turned from a monarchy into a republic.

The power of the monarch passed to two annually elected magistrates called consuls. They also served as commanders-in-chief of the army. The magistrates, though elected by the people, were largely the descendants of the original senators from the time of Romulus.

In 450 B.C., the first Roman law code was inscribed on 12 bronze tablets—known as the Twelve Tables—and publicly displayed in the Roman Forum. These laws included issues of legal procedure, civil rights and property rights and provided the basis for all future Roman civil laws. By around 300 B.C. real political power in Rome was centered in the Senate.

SubQuestion No : 96

Q.96 Lucius Tarquinius was overthrown because he was a:

- Ans
- 1. non-hereditary king
 - 2. generous ruler
 - 3. cruel monarch
 - 4. descendent of Romulus

Question ID : 81616110934

Status : Answered

Chosen Option : 2

Comprehension:

Read the given passage and answer the questions that follow.

As legend has it, Rome was founded in 753 B.C. by Romulus and Remus, twin sons of Mars, the god of war. They had been left to drown in a basket on the Tiber river by a king of a nearby region and were rescued by a she-wolf. The twins lived to defeat that king and founded their own city on the river's banks in 753 B.C. After killing his brother, Romulus became the first king of Rome, which is named after him. A line of Sabine, Latin and Etruscan (earlier Italian civilisations) kings followed in a non-hereditary succession.

Rome's era as a monarchy ended in 509 B.C. with the overthrow of its seventh king, Lucius Tarquinius Superbus, whom ancient historians portrayed as cruel and tyrannical, compared to his benevolent predecessors. Rome now turned from a monarchy into a republic.

The power of the monarch passed to two annually elected magistrates called consuls. They also served as commanders-in-chief of the army. The magistrates, though elected by the people, were largely the descendants of the original senators from the time of Romulus.

In 450 B.C., the first Roman law code was inscribed on 12 bronze tablets—known as the Twelve Tables—and publicly displayed in the Roman Forum. These laws included issues of legal procedure, civil rights and property rights and provided the basis for all future Roman civil laws. By around 300 B.C. real political power in Rome was centered in the Senate.

SubQuestion No : 97

Q.97 Which of the following is NOT an earlier Italian civilisation as mentioned in the passage?

- Ans
- 1. Latin
 - 2. Sabine
 - 3. Roman
 - 4. Etruscan

Question ID : 81616110933

Status : Answered

Chosen Option : 3

Comprehension:

Read the given passage and answer the questions that follow.

As legend has it, Rome was founded in 753 B.C. by Romulus and Remus, twin sons of Mars, the god of war. They had been left to drown in a basket on the Tiber river by a king of a nearby region and were rescued by a she-wolf. The twins lived to defeat that king and founded their own city on the river's banks in 753 B.C. After killing his brother, Romulus became the first king of Rome, which is named after him. A line of Sabine, Latin and Etruscan (earlier Italian civilisations) kings followed in a non-hereditary succession.

Rome's era as a monarchy ended in 509 B.C. with the overthrow of its seventh king, Lucius Tarquinius Superbus, whom ancient historians portrayed as cruel and tyrannical, compared to his benevolent predecessors. Rome now turned from a monarchy into a republic.

The power of the monarch passed to two annually elected magistrates called consuls. They also served as commanders-in-chief of the army. The magistrates, though elected by the people, were largely the descendants of the original senators from the time of Romulus.

In 450 B.C., the first Roman law code was inscribed on 12 bronze tablets—known as the Twelve Tables—and publicly displayed in the Roman Forum. These laws included issues of legal procedure, civil rights and property rights and provided the basis for all future Roman civil laws. By around 300 B.C. real political power in Rome was centered in the Senate.

SubQuestion No : 98

Q.98 Which of the following statements is NOT true?

- Ans
- 1. Romulus and Remus founded the city of Rome.
 - 2. Twelve Tables is the Roman code of law.
 - 3. Elected magistrates served as commanders-in-chief.
 - 4. Consuls were elected every two years by the people.

Question ID : 81616110935

Status : Not Answered

Chosen Option : --

Comprehension:

Read the given passage and answer the questions that follow.

As legend has it, Rome was founded in 753 B.C. by Romulus and Remus, twin sons of Mars, the god of war. They had been left to drown in a basket on the Tiber river by a king of a nearby region and were rescued by a she-wolf. The twins lived to defeat that king and founded their own city on the river's banks in 753 B.C. After killing his brother, Romulus became the first king of Rome, which is named after him. A line of Sabine, Latin and Etruscan (earlier Italian civilisations) kings followed in a non-hereditary succession.

Rome's era as a monarchy ended in 509 B.C. with the overthrow of its seventh king, Lucius Tarquinius Superbus, whom ancient historians portrayed as cruel and tyrannical, compared to his benevolent predecessors. Rome now turned from a monarchy into a republic.

The power of the monarch passed to two annually elected magistrates called consuls. They also served as commanders-in-chief of the army. The magistrates, though elected by the people, were largely the descendants of the original senators from the time of Romulus.

In 450 B.C., the first Roman law code was inscribed on 12 bronze tablets—known as the Twelve Tables—and publicly displayed in the Roman Forum. These laws included issues of legal procedure, civil rights and property rights and provided the basis for all future Roman civil laws. By around 300 B.C. real political power in Rome was centered in the Senate.

SubQuestion No : 99

Q.99 Rome became a republic in ____.

- Ans
- 1. 450 B.C.
 - 2. 300 B.C.
 - 3. 753 B.C.
 - 4. 509 B.C.

Question ID : 81616110932

Status : Answered

Chosen Option : 4

Comprehension:

Read the given passage and answer the questions that follow.

As legend has it, Rome was founded in 753 B.C. by Romulus and Remus, twin sons of Mars, the god of war. They had been left to drown in a basket on the Tiber river by a king of a nearby region and were rescued by a she-wolf. The twins lived to defeat that king and founded their own city on the river's banks in 753 B.C. After killing his brother, Romulus became the first king of Rome, which is named after him. A line of Sabine, Latin and Etruscan (earlier Italian civilisations) kings followed in a non-hereditary succession.

Rome's era as a monarchy ended in 509 B.C. with the overthrow of its seventh king, Lucius Tarquinius Superbus, whom ancient historians portrayed as cruel and tyrannical, compared to his benevolent predecessors. Rome now turned from a monarchy into a republic.

The power of the monarch passed to two annually elected magistrates called consuls. They also served as commanders-in-chief of the army. The magistrates, though elected by the people, were largely the descendants of the original senators from the time of Romulus.

In 450 B.C., the first Roman law code was inscribed on 12 bronze tablets—known as the Twelve Tables—and publicly displayed in the Roman Forum. These laws included issues of legal procedure, civil rights and property rights and provided the basis for all future Roman civil laws. By around 300 B.C. real political power in Rome was centered in the Senate.

SubQuestion No : 100

Q.100 What is the passage mainly about?

- Ans**
- 1. The history of Rome
 - 2. Roman myths and legends
 - 3. The Roman code of law
 - 4. The Republic of Rome

Question ID : 81616110936

Status : Answered

Chosen Option : 4