

# **SSC Steno**

**Previous Year Paper**  
**12 Oct, 2023 Shift 3**



Adda247

# Test Prime

**ALL EXAMS, ONE SUBSCRIPTION**



**1,00,000+**  
Mock Tests



**Personalised  
Report Card**



**Unlimited  
Re-Attempt**



**600+**  
Exam Covered



**25,000+** Previous  
Year Papers



**500%**  
Refund



**ATTEMPT FREE MOCK NOW**

Exam Date	12/10/2023
Exam Time	4:30 PM - 6:30 PM
Subject	Stenographer Grade C and D Examination 2023

## Section : General Intelligence and Reasoning

Q.1 निम्नलिखित में से कौन-सी संख्याओं को (अंकों को नहीं) आपस में प्रतिस्थापित करने पर दिया गया समीकरण संतुलित हो जाएगा?

$$30 \times 6 \div 15 + 7 + 40 = 50$$

- Ans
- 1. 15, 40
  - 2. 6, 30
  - 3. 15, 30
  - 4. 40, 50

Question ID : 264330144864

Option 1 ID : 264330567713

Option 2 ID : 264330567711

Option 3 ID : 264330567712

Option 4 ID : 264330567714

Status : Answered

Chosen Option : 3

Q.2 दी गई श्रृंखला को पूरा करने के लिए कौन-सा अक्षर-समूह प्रश्नवाचक चिह्न (?) को प्रतिस्थापित करेगा?

DTXO, FSVN, JRRM, ?, XPDK

- Ans
- 1. QPKL
  - 2. POLK
  - 3. PQLL
  - 4. QLPK

Question ID : 264330144906

Option 1 ID : 264330567881

Option 2 ID : 264330567880

Option 3 ID : 264330567882

Option 4 ID : 264330567879

Status : Answered

Chosen Option : 3

Q.3 तीन कथनों के बाद तीन निष्कर्ष I, II और III दिए गए हैं। कथनों को सत्य मानते हुए, भले ही वे सामान्य रूप से ज्ञात तथ्यों से भिन्न प्रतीत होते हों, निर्धारित करें कि कौन-सा/से निष्कर्ष कथनों का तार्किक रूप से अनुसरण करता है/करते हैं।

कथन:

सभी बार्बी स्नो-व्हाइट हैं।

कुछ बार्बी एरियल हैं।

कुछ एरियल डोरेमोन हैं।

निष्कर्ष:

I. कुछ डोरेमोन स्नो-व्हाइट हैं।

II. कुछ बार्बी डोरेमोन हैं।

III. कुछ एरियल स्नो-व्हाइट हैं।

Ans  1. केवल निष्कर्ष II और III अनुसरण करते हैं।

2. केवल निष्कर्ष I और III अनुसरण करते हैं।

3. केवल निष्कर्ष III अनुसरण करता है।

4. सभी निष्कर्ष अनुसरण करते हैं।

Question ID : 26433085341

Option 1 ID : 264330335067

Option 2 ID : 264330335066

Option 3 ID : 264330335065

Option 4 ID : 264330335068

Status : Answered

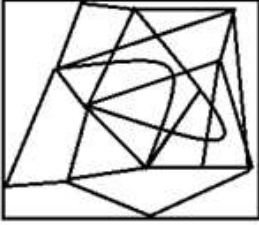
Chosen Option : 3

Q.4 उस विकल्प आकृति का चयन करें, जिसमें दी गई आकृति सन्निहित है (घुमाने की अनुमति नहीं है)।

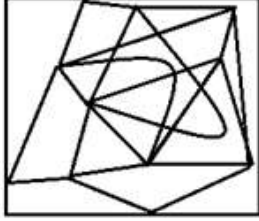


Ans

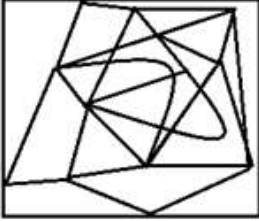
✗ 1.



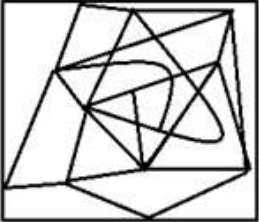
✓ 2.



✗ 3.



✗ 4.

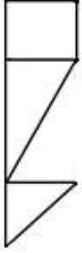


Question ID : 264330129591  
Option 1 ID : 264330507731  
Option 2 ID : 264330507732  
Option 3 ID : 264330507730  
Option 4 ID : 264330507733

Status : Answered

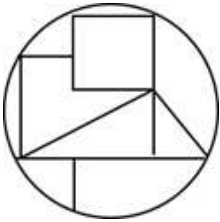
Chosen Option : 2

Q.5 उस विकल्प का चयन करें जिसमें दी गई आकृति अंतर्निहित है (घुमाने की अनुमति नहीं है)।

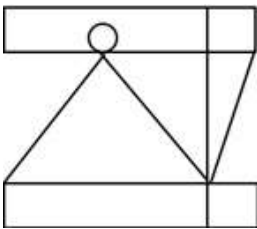


Ans

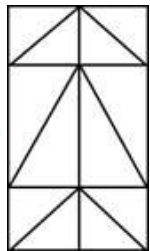
✗ 1.



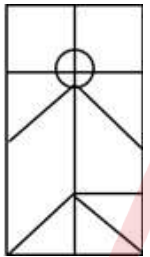
✗ 2.



✓ 3.



✗ 4.



Question ID : 264330111654

Option 1 ID : 264330438703

Option 2 ID : 264330438704

Option 3 ID : 264330438701

Option 4 ID : 264330438702

Status : Answered

Chosen Option : 3

Q.6 M, R की पुत्री है। Z, M का पति है। X, R का पुत्र है। Z, Y का दामाद है। X, Y से किस प्रकार संबंधित है?

Ans

✗ 1. दामाद

✗ 2. ताऊ/चाचा

✗ 3. भाई

✓ 4. पुत्र

Question ID : 26433099144

Option 1 ID : 264330389189

Option 2 ID : 264330389192

Option 3 ID : 264330389190

Option 4 ID : 264330389191

Status : Answered

Chosen Option : 4

Q.7 दी गई श्रृंखला को पूरा करने के लिए कौन-सा अक्षर-समूह प्रश्न चिह्न (?) को प्रतिस्थापित करेगा?  
TWGC, PUFZ, ?, HQDT, DOCQ

- Ans
- 1. LSDV
  - 2. LSEV
  - 3. LSEW
  - 4. LSDW

Question ID : 26433067961  
Option 1 ID : 264330266359  
Option 2 ID : 264330266358  
Option 3 ID : 264330266356  
Option 4 ID : 264330266357  
Status : Answered  
Chosen Option : 3

Q.8 निम्नलिखित चार अक्षर-समूहों में से तीन किसी निश्चित तरीके से आपस में संगत हैं जबकि कोई एक उनसे असंगत है। असंगत अक्षर-समूह का चयन कीजिए।

- Ans
- 1. KPR
  - 2. BYA
  - 3. FUW
  - 4. NMP

Question ID : 26433057222  
Option 1 ID : 264330223875  
Option 2 ID : 264330223872  
Option 3 ID : 264330223873  
Option 4 ID : 264330223874  
Status : Answered  
Chosen Option : 4

Q.9 उस विकल्प का चयन करें जो तीसरे शब्द से उसी प्रकार संबंधित है जिस प्रकार दूसरा शब्द पहले शब्द से संबंधित है। (शब्दों को अर्थपूर्ण अंग्रेजी/हिन्दी शब्दों के रूप में माना जाना चाहिए और इन्हें शब्द में अक्षरों की संख्या/ व्यंजनों की संख्या/स्वरों की संख्या के आधार पर एक-दूसरे से संबद्ध नहीं किया जाना चाहिए।)  
क्रिकेट : बैट :: टेनिस : ?

- Ans
- 1. भाला
  - 2. पोल
  - 3. रैकेट
  - 4. नेट

Question ID : 26433087286  
Option 1 ID : 264330342783  
Option 2 ID : 264330342784  
Option 3 ID : 264330342782  
Option 4 ID : 264330342781  
Status : Answered  
Chosen Option : 3

Q.10 एक निश्चित कूट भाषा में, 'CREATE' को 'DTHEYK' के रूप में लिखा जाता है, 'CRITICAL' को 'DTLXNIHT' के रूप में लिखा जाता है, उसी भाषा में 'SKILL' को कैसे लिखा जाएगा?

- Ans
- 1. TNO PQ
  - 2. TMLPQ
  - 3. RMLPR
  - 4. SMLQQ

Question ID : 26433079394  
 Option 1 ID : 264330311566  
 Option 2 ID : 264330311564  
 Option 3 ID : 264330311565  
 Option 4 ID : 264330311567  
 Status : Answered  
 Chosen Option : 2

Q.11 उस विकल्प आकृति का चयन करें, जिसमें दी गई आकृति सन्निहित है (घुमाने की अनुमति नहीं है)।



Ans

- 1.
- 2.
- 3.
- 4.

Question ID : 264330129590  
 Option 1 ID : 264330507727  
 Option 2 ID : 264330507729  
 Option 3 ID : 264330507726  
 Option 4 ID : 264330507728  
 Status : Answered  
 Chosen Option : 3

Q.12 निम्नलिखित में से कौन-सा पद दी गई श्रृंखला में प्रश्न-चिह्न (?) को प्रतिस्थापित करेगा?  
BDH, CEI, DFJ, EGK, FHL, ?

- Ans  1. GHJ  
 2. GKM  
 3. GIM  
 4. GHM

Question ID : 26433090155  
Option 1 ID : 264330354097  
Option 2 ID : 264330354100  
Option 3 ID : 264330354099  
Option 4 ID : 264330354098  
Status : Answered  
Chosen Option : 3

Q.13 मेहर अपने घर से पूर्व की ओर 19 km झाड़व करता है। फिर वह बाएं मुड़ता है और 11 km झाड़व करता है। वह फिर से बाएं मुड़ता है और 19 km झाड़व करता है। वह एक सीधी रेखा में आरंभिक बिंदु से कितनी दूर है?

- Ans  1. 11 km  
 2. 21 km  
 3. 30 km  
 4. 19 km

Question ID : 264330132110  
Option 1 ID : 264330517538  
Option 2 ID : 264330517535  
Option 3 ID : 264330517536  
Option 4 ID : 264330517537  
Status : Answered  
Chosen Option : 1

Q.14 उस समुच्चय का चयन करें जिसमें दी गई संख्याएं आपस में उसी प्रकार संबंधित हैं, जिस प्रकार प्रश्न में दिए गए समुच्चय की संख्याएं आपस में संबंधित हैं।

(नोट: संख्याओं को उसके घटक अंकों में विभाजित किए बिना, पूर्ण संख्याओं पर ही गणितीय संक्रियाएँ की जानी चाहिए। जैसे 13 - मान लीजिए 13 पर गणितीय संक्रियाएँ जैसे कि 13 में जोड़ना/घटाना/गुणा करना आदि किया जा सकता है। 13 को 1 और 3 में तोड़कर और फिर 1 और 3 पर गणितीय संक्रियाएँ करने की अनुमति नहीं है।)  
(2, 35, 5)  
(6, 50, 4)

- Ans  1. (3, 100, 7)  
 2. (3, 35, 5)  
 3. (9, 60, 4)  
 4. (4, 45, 5)

Question ID : 26433087038  
Option 1 ID : 264330341793  
Option 2 ID : 264330341795  
Option 3 ID : 264330341796  
Option 4 ID : 264330341794  
Status : Answered  
Chosen Option : 4

Q.15 यदि 'A' का अर्थ '+' है, 'B' का अर्थ 'x' है, 'C' का अर्थ '+' है और 'D' का अर्थ '-' है, तो निम्नलिखित समीकरण में प्रश्न चिह्न (?) के स्थान पर क्या आएगा?  
16 B 5 D 16 A 8 C 10 = ?

- Ans  1. 68  
 2. 58  
 3. 88  
 4. 78

Question ID : 264330141902  
Option 1 ID : 264330555928  
Option 2 ID : 264330555927  
Option 3 ID : 264330555930  
Option 4 ID : 264330555929  
Status : Answered  
Chosen Option : 3

Q.16 दिए गए विकल्पों में से उस संख्या का चयन कीजिए जो निम्नलिखित श्रृंखला में प्रश्न चिह्न (?) के स्थान पर आ सकती है।  
43, 47, 55, 67, ?

- Ans  1. 83  
 2. 87  
 3. 85  
 4. 81

Question ID : 264330112672  
Option 1 ID : 264330442774  
Option 2 ID : 264330442776  
Option 3 ID : 264330442775  
Option 4 ID : 264330442773  
Status : Answered  
Chosen Option : 1

Q.17 उस विकल्प का चयन कीजिए जो पाँचवीं संख्या से उसी प्रकार संबंधित हो, जैसे दूसरी संख्या पहली संख्या से संबंधित है और चौथी संख्या तीसरी संख्या से संबंधित है।  
15 : 145 :: 10 : 95 :: 20 : ?

- Ans  1. 195  
 2. 205  
 3. 200  
 4. 190

Question ID : 26433089553  
Option 1 ID : 264330351714  
Option 2 ID : 264330351716  
Option 3 ID : 264330351715  
Option 4 ID : 264330351713  
Status : Answered  
Chosen Option : 1

Q.18 दिए गए विकल्पों में से उस संख्या का चयन कीजिए जो निम्नलिखित श्रृंखला में प्रश्न चिह्न (?) के स्थान पर आ सकती है।  
23, 34, 45, 56, 67, ?

Ans  1. 78

2. 76

3. 77

4. 79

Question ID : 264330112657

Option 1 ID : 264330442715

Option 2 ID : 264330442713

Option 3 ID : 264330442714

Option 4 ID : 264330442716

Status : Answered

Chosen Option : 1

Q.19 दो कथन दिए गए हैं, जिसके बाद दो निष्कर्ष I और II दिए गए हैं। कथनों को सत्य मानते हुए, भले ही वे सामान्य रूप से ज्ञात तथ्यों से भिन्न प्रतीत होते हों, निर्णय लें कि कौन-सा/से निष्कर्ष कथनों का तार्किक रूप से अनुसरण करता है/करते हैं।

कथन:

कुछ पियानो गिटार हैं।

सभी गिटार बांसुरी हैं।

निष्कर्ष:

I) कुछ पियानो बांसुरी हैं।

II) कोई गिटार पियानो नहीं है।

Ans  1. निष्कर्ष I और II दोनों अनुसरण करते हैं।

2. केवल निष्कर्ष II अनुसरण करता है।

3. केवल निष्कर्ष I अनुसरण करता है।

4. न तो निष्कर्ष I अनुसरण करता है और न ही II अनुसरण करता है।

Question ID : 26433067709

Option 1 ID : 264330265350

Option 2 ID : 264330265349

Option 3 ID : 264330265348

Option 4 ID : 264330265351

Status : Answered

Chosen Option : 3

Q.20 यदि 'A' का अर्थ '+' है, 'B' का अर्थ 'x' है, 'C' का अर्थ '+' है और 'D' का अर्थ '-' है, तो निम्नलिखित समीकरण में प्रश्न चिह्न (?) के स्थान पर क्या आएगा?  
62 B 2 D 45 A 5 C 7 = ?

Ans  1. 123

2. 122

3. 120

4. 121

Question ID : 264330141903

Option 1 ID : 264330555934

Option 2 ID : 264330555933

Option 3 ID : 264330555931

Option 4 ID : 264330555932

Status : Answered

Chosen Option : 2

Q.21 निम्नांकित शृंखला में पैटर्न को जारी रखने के लिए प्रश्नचिह्न (?) को किस आकृति द्वारा प्रतिस्थापित किया जाना चाहिए?

P	P	L	L	?
A	3	3	O	
O L 3	A O L	P A O	3 P A	

Ans

✗ 1.

L
A
O 3 P

✗ 2.

A
L
O 3 P

✓ 3.

A
O
L 3 P

✗ 4.

O
A
L 3 P



Question ID : 264330129593  
 Option 1 ID : 264330507738  
 Option 2 ID : 264330507739  
 Option 3 ID : 264330507740  
 Option 4 ID : 264330507741  
 Status : Answered  
 Chosen Option : 2

Q.22 नीचे तीन कथन और उसके बाद I, II और III संख्यांकित वाले तीन निष्कर्ष दिये गए हैं। यह मानते हुए कि कथनों में दी गई जानकारी सत्य है, भले ही ये कथन सामान्य रूप से ज्ञात तथ्यों से भिन्न प्रतीत होते हों, यह निर्णय कीजिए कि कौन सा/से निष्कर्ष इन कथनों का तार्किक रूप से अनुसरण करता है/करते हैं।

कथन:

सभी घड़ियां कैमरे हैं।

कोई कैमरा पेन नहीं है।

कुछ घड़ियां गेंद हैं।

निष्कर्ष:

I. कुछ गेंद कैमरे हैं।

II. कोई गेंद पेन नहीं है।

III. कोई पेन घड़ी नहीं है।

- Ans  1. निष्कर्ष I और III दोनों अनुसरण करते हैं।  
 2. निष्कर्ष I और II दोनों अनुसरण करते हैं।  
 3. केवल निष्कर्ष II अनुसरण करता है।  
 4. केवल निष्कर्ष I अनुसरण करता है।

Question ID : 264330144912

Option 1 ID : 264330567904

Option 2 ID : 264330567903

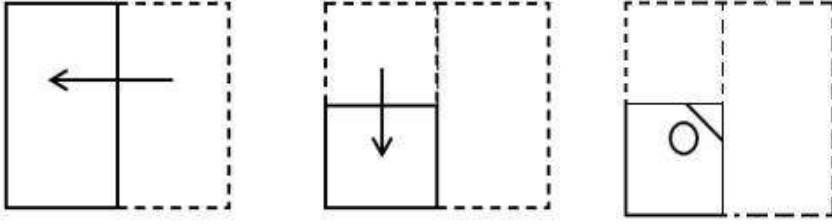
Option 3 ID : 264330567905

Option 4 ID : 264330567906

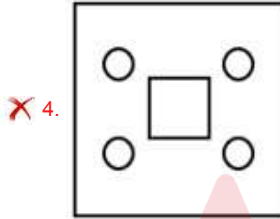
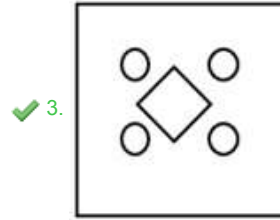
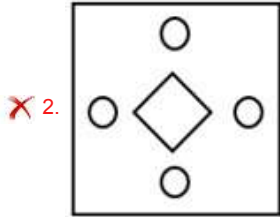
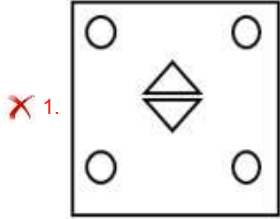
Status : Answered

Chosen Option : 1

Q.23 एक कागज को नीचे दर्शाए गए अनुसार मोड़ा और काटा जाता है। खोलने के बाद यह कैसा दिखाई देगा?



Ans



Question ID : 264330106342

Option 1 ID : 264330417669

Option 2 ID : 264330417672

Option 3 ID : 264330417671

Option 4 ID : 264330417670

Status : Answered

Chosen Option : 3

Q.24 उस विकल्प का चयन करें, जो छठी संख्या से उसी प्रकार संबंधित है, जिस प्रकार पहली संख्या दूसरी संख्या से और तीसरी संख्या चौथी संख्या से संबंधित है।

1444 : 38 :: 1225 : 35 :: ? : 47

Ans ✓ 1. 2209

✗ 2. 1369

✗ 3. 1024

✗ 4. 2162

Question ID : 26433087210

Option 1 ID : 264330342479

Option 2 ID : 264330342477

Option 3 ID : 264330342478

Option 4 ID : 264330342480

Status : Answered

Chosen Option : 1

Q.25 उस समुच्चय का चयन कीजिए, जिसमें संख्याएँ उसी तरह से संबंधित हैं, जिस प्रकार दिए गए समुच्चय की संख्याएँ आपस में संबंधित हैं। (नोट: संख्याओं को उसके घटक अंकों में विभाजित किए बिना, पूर्ण संख्याओं पर ही गणितीय संक्रियाएँ की जानी चाहिए। जैसे 13 - मान लीजिए 13 पर गणितीय संक्रियाएँ जैसे कि 13 में जोड़ना/घटाना/गुणा करना आदि किया जा सकता है। 13 को 1 और 3 में तोड़कर और फिर 1 और 3 पर गणितीय संक्रियाएँ करने की अनुमति नहीं है।)  
(7, 17, 35)  
(5, 11, 23)

Ans  1. (8, 20, 39)

2. (10, 26, 54)

3. (11, 29, 58)

4. (9, 23, 47)

Question ID : 26433078962

Option 1 ID : 264330309863

Option 2 ID : 264330309862

Option 3 ID : 264330309860

Option 4 ID : 264330309861

Status : Not Answered

Chosen Option : --



Q.26 निम्नांकित शृंखला में पैटर्न को जारी रखने के लिए प्रश्नचिह्न (?) को किस आकृति द्वारा प्रतिस्थापित किया जाना चाहिए?

L	T	U	3	6	L	6	L	T	=	U	6	
=				T		□				L		?
3	6	□	□	=	U	=	U	4	4	□	T	

Ans

✓ 1. 

U	6	L
	4	
□	T	F

✗ 2. 


T	□	4
	=	
L	U	=

✗ 3. 

T	6	U
	=	
□	4	L

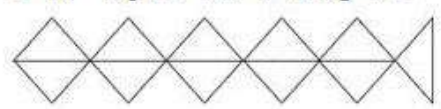
✗ 4. 

F	=	U
	6	
L	4	□



Question ID : 264330129606  
 Option 1 ID : 264330507790  
 Option 2 ID : 264330507793  
 Option 3 ID : 264330507792  
 Option 4 ID : 264330507791  
 Status : Not Answered  
 Chosen Option : --

Q.27 दी गई आकृति में कितने त्रिभुज हैं?



- Ans
- ✗ 1. 10
  - ✗ 2. 9
  - ✗ 3. 12
  - ✓ 4. 11

Question ID : 26433068629  
 Option 1 ID : 264330269031  
 Option 2 ID : 264330269030  
 Option 3 ID : 264330269029  
 Option 4 ID : 264330269028  
 Status : Answered  
 Chosen Option : 4

Q.28 उस विकल्प का चयन करें जो तीसरे शब्द से उसी प्रकार संबंधित है जिस प्रकार दूसरा शब्द पहले शब्द से संबंधित है। (शब्दों को हिंदी के अर्थपूर्ण शब्दों के रूप में माना जाना चाहिए और उन्हें अक्षरों की संख्या/व्यंजनों/स्वरों की संख्या के आधार पर एक-दूसरे से संबंधित नहीं किया जाना चाहिए।)  
साँप : फुफकार :: पत्ते : ?

- Ans
- 1. कलरव
  - 2. कुड़कुड़ाना
  - 3. गुंजन
  - 4. सरसराहट

Question ID : 26433069173  
Option 1 ID : 264330271204  
Option 2 ID : 264330271205  
Option 3 ID : 264330271207  
Option 4 ID : 264330271206  
Status : Answered  
Chosen Option : 4

Q.29 A, B, C, D, E, F और G की लंबाई भिन्न-भिन्न है। A केवल तीन लोगों से छोटा है। D केवल F से लंबा है। B, A से लंबा है, लेकिन C और E दोनों से छोटा है। E सबसे लंबा व्यक्ति नहीं है। कितने व्यक्ति G से छोटे हैं?

- Ans
- 1. तीन
  - 2. पाँच
  - 3. चार
  - 4. दो

Question ID : 264330131657  
Option 1 ID : 264330515728  
Option 2 ID : 264330515729  
Option 3 ID : 264330515727  
Option 4 ID : 264330515730  
Status : Answered  
Chosen Option : 4

Q.30 दिए गए विकल्पों में से उस संख्या का चयन कीजिए जो निम्नलिखित श्रृंखला में प्रश्न चिह्न (?) के स्थान पर आ सकती है।  
11, 12, 14, 17, ?

- Ans
- 1. 21
  - 2. 22
  - 3. 23
  - 4. 20

Question ID : 264330112661  
Option 1 ID : 264330442730  
Option 2 ID : 264330442731  
Option 3 ID : 264330442732  
Option 4 ID : 264330442729  
Status : Answered  
Chosen Option : 1

Q.31 उस विकल्प का चयन करें, जो छठी संख्या से उसी प्रकार संबंधित है, जिस प्रकार पहली संख्या दूसरी संख्या से और तीसरी संख्या चौथी संख्या से संबंधित है।  
133 : 7 :: 247 : 13 :: ? : 19

- Ans
- 1. 266
  - 2. 399
  - 3. 361
  - 4. 242

Question ID : 26433087209  
Option 1 ID : 264330342473  
Option 2 ID : 264330342476  
Option 3 ID : 264330342475  
Option 4 ID : 264330342474  
Status : Answered  
Chosen Option : 3

Q.32 उस विकल्प का चयन कीजिए जो नीचे दिए गए शब्दों के उस सही क्रम को दर्शाता है, जिस क्रम में वे अंग्रेजी शब्दकोश में आएंगे।

1. Melodrama
2. Melodious
3. Melancholy
4. Melting
5. Melanin
6. Mellowed

- Ans
- 1. 4, 3, 5, 6, 2, 1
  - 2. 3, 5, 1, 2, 6, 4
  - 3. 3, 5, 6, 2, 1, 4
  - 4. 3, 5, 6, 1, 2, 4

Question ID : 264330144928  
Option 1 ID : 264330567968  
Option 2 ID : 264330567967  
Option 3 ID : 264330567970  
Option 4 ID : 264330567969  
Status : Answered  
Chosen Option : 3

Q.33 श्रुति अपने घर से निकलती है और 47 m पश्चिम की ओर चलती है। फिर वह दाएँ मुड़ती है और 18 m चलती है। वह बाएँ मुड़ती है और 53 m चलती है। अंत में वह बाएँ मुड़ती है और 30 m चलती है। यह उस खंभे से कितनी दूर है, जो उसके घर से ठीक 12 m दक्षिण में है? (मान लीजिए कि सभी मोड़ केवल 90° वाले मोड़ हैं।)

- Ans
- 1. 100 m
  - 2. 105 m
  - 3. 90 m
  - 4. 110 m

Question ID : 264330131619  
Option 1 ID : 264330515576  
Option 2 ID : 264330515578  
Option 3 ID : 264330515575  
Option 4 ID : 264330515577  
Status : Answered  
Chosen Option : 1

Q.34 छह विद्यार्थी एक वृत्ताकार मेज के परितः केंद्र की ओर मुख करके बैठे हैं। अमित, जिया के बायें दूसरे स्थान पर बैठा है। जिया, वरुण और प्रमोद दोनों की निकटतम पड़ोसी है। सिया, अमित के बायें दूसरे स्थान पर बैठी है। अमित, महेश और वरुण दोनों का निकटतम पड़ोसी है। सिया और जिया का निकटतम पड़ोसी कौन है?

- Ans
- 1. अमित
  - 2. वरुण
  - 3. महेश
  - 4. प्रमोद

Question ID : 26433055680

Option 1 ID : 264330217706

Option 2 ID : 264330217705

Option 3 ID : 264330217707

Option 4 ID : 264330217704

Status : Answered

Chosen Option : 4

Q.35 एक निश्चित कूट भाषा में, 'COFFEE' को 'FTKKJH' के रूप में लिखा जाता है और 'EXPERT' को 'HCUJWW' के रूप में लिखा जाता है। उसी भाषा में 'FRENCH' को कैसे लिखा जाएगा?

- Ans
- 1. TWWSHK
  - 2. TWJMGL
  - 3. JXWTHL
  - 4. IWJSHK

Question ID : 26433082560

Option 1 ID : 264330324073

Option 2 ID : 264330324074

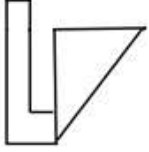
Option 3 ID : 264330324076

Option 4 ID : 264330324075

Status : Answered

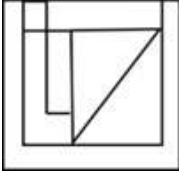
Chosen Option : 4

Q.36 उस विकल्प का चयन करें जिसमें दी गई आकृति अंतर्निहित है (घुमाने की अनुमति नहीं है)।



Ans

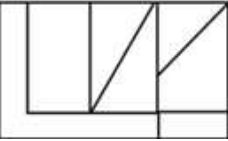
✓ 1.



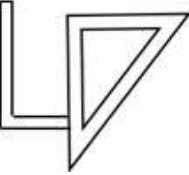
✗ 2.



✗ 3.



✗ 4.



Question ID : 264330111659

Option 1 ID : 264330438722

Option 2 ID : 264330438721

Option 3 ID : 264330438724

Option 4 ID : 264330438723

Status : Answered

Chosen Option : 1

Q.37 गणितीय चिह्नों के उचित संयोजन को चुनिए, जो '%' को क्रमिक रूप से प्रतिस्थापित कर सके और दिए गए समीकरण को संतुलित कर सके।

35 % 4 % 12 % 3 % 6 % 5 % 5

Ans ✗ 1. -, +, ÷, ×, =, +

✓ 2. -, +, ÷, =, ×, +

✗ 3. -, +, ×, =, ÷, +

✗ 4. +, -, ÷, ×, =, +

Question ID : 264330129587

Option 1 ID : 264330507717

Option 2 ID : 264330507715

Option 3 ID : 264330507714

Option 4 ID : 264330507716

Status : Answered

Chosen Option : 2

Q.38 सात लोग A, B, C, D, E, F और G उत्तर की तरफ मुंह करके एक सीधी पंक्ति में बैठे हुए हैं। E के बाएं केवल 2 लोग बैठे हैं। G, E के ठीक बगल में बैठा है। B, F के दाएं ठीक बगल में बैठा है। G और F के बीच में केवल 3 लोग बैठे हैं। A, D के बाएं ठीक बगल में बैठा है।

E के दाएं ठीक बगल में कौन बैठा है?

- Ans
- 1. G
  - 2. D
  - 3. A
  - 4. F

Question ID : 264330144960  
Option 1 ID : 264330568095  
Option 2 ID : 264330568097  
Option 3 ID : 264330568096  
Option 4 ID : 264330568098  
Status : Answered  
Chosen Option : 3

Q.39 निम्नलिखित में से कौन-सी संख्या, दी गई श्रृंखला में प्रश्नचिह्न (?) को प्रतिस्थापित करेगी?  
414, 410, 402, 390, 374, ?

- Ans
- 1. 366
  - 2. 367
  - 3. 309
  - 4. 354

Question ID : 264330102158  
Option 1 ID : 264330401100  
Option 2 ID : 264330401097  
Option 3 ID : 264330401098  
Option 4 ID : 264330401099  
Status : Answered  
Chosen Option : 4

Q.40 दो कथनों के बाद दो निष्कर्ष I और II दिए गए हैं। कथनों को सत्य मानते हुए, भले ही वे सामान्य रूप से ज्ञात तथ्यों से भिन्न प्रतीत होते हों, निर्णय लीजिए कि कौन सा/से निष्कर्ष कथनों का तार्किक रूप से अनुसरण करता/करते है/हैं।

कथन:

कुछ पर्दे, पंखे हैं।

कुछ पंखे, बल्ब हैं।

निष्कर्ष:


I. कुछ पर्दे, बल्ब हैं।

II. सभी बल्ब, पंखे हैं।

- Ans
- 1. केवल निष्कर्ष II अनुसरण करता है
  - 2. न तो निष्कर्ष I अनुसरण करता है और न ही II अनुसरण करता है
  - 3. निष्कर्ष I और II दोनों अनुसरण करते हैं
  - 4. केवल निष्कर्ष I अनुसरण करता है

Question ID : 264330144959  
Option 1 ID : 264330568092  
Option 2 ID : 264330568094  
Option 3 ID : 264330568093  
Option 4 ID : 264330568091  
Status : Answered  
Chosen Option : 2

Q.41 दिए गए विकल्पों में से उस आकृति का चयन करें, जो निम्नलिखित शृंखला में प्रश्नचिह्न (?) को प्रतिस्थापित करेगी।



Ans

✓ 1.



✗ 2.



✗ 3.



✗ 4.



Question ID : 26433087164

Option 1 ID : 264330342295

Option 2 ID : 264330342294

Option 3 ID : 264330342293

Option 4 ID : 264330342296

Status : Answered

Chosen Option : 1

Q.42 नीचे एक कथन दिया गया है जिसके बाद दो निष्कर्ष I और II दिए गए हैं। कथन का ध्यानपूर्वक अध्ययन करें और निर्धारित करें कि कौन सा/से निष्कर्ष निश्चित रूप से सत्य है/हैं।

कथन:  $M \geq N = O \geq P \leq W$ ;  $X \leq O > Y$

निष्कर्ष I:  $M > Y$

निष्कर्ष II:  $X \leq W$

✗ 1. केवल निष्कर्ष II सत्य है।

✗ 2. निष्कर्ष I और II दोनों सत्य हैं।

✗ 3. न तो निष्कर्ष I सत्य है और न ही II सत्य है।

✓ 4. केवल निष्कर्ष I सत्य है।

Question ID : 264330131076

Option 1 ID : 264330513416

Option 2 ID : 264330513417

Option 3 ID : 264330513418

Option 4 ID : 264330513415

Status : Answered

Chosen Option : 2

Q.43 निम्नलिखित में से उस समुच्चय का चयन कीजिए, जिसमें संख्याएँ उसी प्रकार से संबंधित हैं, जिस प्रकार दिए गए समुच्चय की संख्याएँ संबंधित हैं।  
(नोट: संख्याओं को उसके घटक अंकों में विभाजित किए बिना, पूर्ण संख्याओं पर ही गणितीय संक्रियाएँ की जानी चाहिए। जैसे 13 - मान लीजिए 13 पर गणितीय संक्रियाएँ जैसे कि 13 में जोड़ना/घटाना/गुणा करना आदि किया जा सकता है। 13 को 1 और 3 में तोड़कर और फिर 1 और 3 पर गणितीय संक्रियाएँ करने की अनुमति नहीं है।)  
(100, 30, 10)  
(250, 60, 70)

- Ans  1. (209, 122, 109)  
 2. (700, 220, 40)  
 3. (310, 198, 30)  
 4. (240, 187, 104)

Question ID : 26433083126  
 Option 1 ID : 264330326337  
 Option 2 ID : 264330326339  
 Option 3 ID : 264330326340  
 Option 4 ID : 264330326338  
 Status : Answered  
 Chosen Option : 2

Q.44 दिए गए समीकरण को संतुलित करने के लिए किन दो संख्याओं (अंकों को नहीं) को परस्पर बदलना होगा?

$$(\sqrt{144} + 4)^3 + (6)^2 - (28 \times 2) + 72 + (32 \div 8) \times 3 = 52$$

- Ans  1. 3 और 6  
 2. 4 और 6  
 3. 2 और 8  
 4. 2 और 4

Question ID : 264330144856  
 Option 1 ID : 264330567680  
 Option 2 ID : 264330567681  
 Option 3 ID : 264330567679  
 Option 4 ID : 264330567682  
 Status : Answered  
 Chosen Option : 2

Q.45 यदि 12 जनवरी 2015 को सोमवार था, तो 26 जनवरी 2016 को सप्ताह का कौन-सा दिन था?

- Ans  1. मंगलवार  
 2. बुधवार  
 3. गुरुवार  
 4. शुक्रवार

Question ID : 264330144943  
 Option 1 ID : 264330568027  
 Option 2 ID : 264330568028  
 Option 3 ID : 264330568029  
 Option 4 ID : 264330568030  
 Status : Answered  
 Chosen Option : 2

Q.46 'P + Q' का अर्थ है 'P, Q की पत्नी है'  
 'P - Q' का अर्थ है 'P, Q की पुत्री है'  
 'P × Q' का अर्थ है 'P, Q का पिता है'  
 'P ÷ Q' का अर्थ है 'P, Q का भाई है'  
 यदि 'V + M ÷ R - K' है, तो R, V से किस प्रकार संबंधित है?

- Ans  1. भाई  
 2. सास  
 3. ननद  
 4. बहन

Question ID : 264330102471  
 Option 1 ID : 264330402313  
 Option 2 ID : 264330402316  
 Option 3 ID : 264330402314  
 Option 4 ID : 264330402315  
 Status : Answered  
 Chosen Option : 3

Q.47 निम्नलिखित चार अक्षर-समूहों में से तीन किसी निश्चित तरीके से आपस में संगत हैं जबकि कोई एक उनसे असंगत है। असंगत अक्षर-समूह का चयन कीजिए।

- Ans  1. KNM  
 2. GTQ  
 3. RUF  
 4. ADW

Question ID : 26433058004  
 Option 1 ID : 264330227002  
 Option 2 ID : 264330227000  
 Option 3 ID : 264330227003  
 Option 4 ID : 264330227001  
 Status : Answered  
 Chosen Option : 2

Q.48 यदि '+' का अर्थ '÷', '-' का अर्थ '+', '×' का अर्थ '-' और '÷' का अर्थ '×' है, तो निम्नलिखित समीकरण में प्रश्न चिह्न (?) के स्थान पर क्या आएगा?

$$320 + 64 - 18 \div 2 \times 28 = ?$$

- Ans  1. 29  
 2. 13  
 3. 22  
 4. 18

Question ID : 264330101103  
 Option 1 ID : 264330396960  
 Option 2 ID : 264330396957  
 Option 3 ID : 264330396959  
 Option 4 ID : 264330396958  
 Status : Answered  
 Chosen Option : 2

Q.49 निम्नलिखित शब्दों को तार्किक और अर्थपूर्ण क्रम में दर्शाने वाले सही विकल्प का चयन करें।

1. फर्नीचर
2. अलमारी
3. हैंडल
4. दर्राज
5. लकड़ी

Ans  1. 1, 3, 4, 2, 5  
 2. 3, 4, 2, 5, 1  
 3. 4, 3, 1, 2, 5  
 4. 3, 4, 2, 1, 5

Question ID : 264330132912

Option 1 ID : 264330520710

Option 2 ID : 264330520708

Option 3 ID : 264330520707

Option 4 ID : 264330520709

Status : Answered

Chosen Option : 1

Q.50 निम्नलिखित में से कौन-सी संख्या दी गई श्रृंखला में प्रश्न चिह्न (?) को प्रतिस्थापित करेगी?  
 48, 200, 540, ?, 2240

Ans  1. 1248  
 2. 1348  
 3. 1156  
 4. 1176

Question ID : 26433082430

Option 1 ID : 264330323556

Option 2 ID : 264330323554

Option 3 ID : 264330323555

Option 4 ID : 264330323553

Status : Not Answered

Chosen Option : --

Section : General Awareness

Q.1 कैलाश मंदिर, \_\_\_\_\_ के अंदर स्थित है।

Ans  1. एलोरा की गुफाओं  
 2. खंडगिरी गुफाओं  
 3. अजंता की गुफाओं  
 4. एलीफंटा गुफाओं

Question ID : 26433066564

Option 1 ID : 264330260783

Option 2 ID : 264330260781

Option 3 ID : 264330260782

Option 4 ID : 264330260780

Status : Answered

Chosen Option : 1

Q.2 तिरुपति तिरुमाला ब्रह्मोत्सवम कितने दिनों के लिए आयोजित किया जाता है?

- Ans  1. 9  
 2. 5  
 3. 15  
 4. 12

Question ID : 26433074094  
 Option 1 ID : 264330290497  
 Option 2 ID : 264330290496  
 Option 3 ID : 264330290499  
 Option 4 ID : 264330290498  
 Status : Not Answered  
 Chosen Option : --

Q.3 प्रावस्था संक्रमण की कौन-सी प्रक्रिया निक्षेपण के विपरीत है?

- Ans  1. घनीकरण  
 2. ऊर्ध्वपातन  
 3. संलयन  
 4. वाष्पीकरण

Question ID : 264330169304  
 Option 1 ID : 264330663997  
 Option 2 ID : 264330663998  
 Option 3 ID : 264330663995  
 Option 4 ID : 264330663996  
 Status : Answered  
 Chosen Option : 2

Q.4 1957 में हचिंसन (Hutchinson) द्वारा किसी व्यक्ति या जनसंख्या द्वारा स्वयं के पर्यावरण के सभी पहलुओं के साथ संबंध को व्यक्त करने के लिए कौन-सी अवधारणा प्रस्तावित की गई थी?

- Ans  1. पारिस्थितिक निकेत  
 2. पारिस्थितिक पिरामिड  
 3. पारिस्थितिक अनुक्रम  
 4. पारिस्थितिक स्तरीकरण

Question ID : 264330131003  
 Option 1 ID : 264330513123  
 Option 2 ID : 264330513126  
 Option 3 ID : 264330513124  
 Option 4 ID : 264330513125  
 Status : Answered  
 Chosen Option : 2

Q.5 निम्नलिखित में से कौन-सा वेद भारत के पूर्व वैदिक काल के लोगों के जीवन का वर्णन करता है और इसमें 10 मंडलों में विभाजित 1028 सूक्तों का संग्रह है?

- Ans
- 1. सामवेद
  - 2. यजुर्वेद
  - 3. ऋग्वेद
  - 4. अथर्ववेद

Question ID : 264330165335  
 Option 1 ID : 264330648421  
 Option 2 ID : 264330648422  
 Option 3 ID : 264330648420  
 Option 4 ID : 264330648419  
 Status : Answered  
 Chosen Option : 3

Q.6 इस्लाम और ईसाई धर्म जैसे अन्य धर्मों में परिवर्तित कर दिये गए हिंदुओं के शुद्धिकरण के लिए 'शुद्धि' आंदोलन निम्नलिखित में से किस संस्था द्वारा चलाया गया था?

- Ans
- 1. रामकृष्ण मिशन
  - 2. ब्रह्म समाज
  - 3. वेद समाज
  - 4. आर्य समाज

Question ID : 264330165403  
 Option 1 ID : 264330648694  
 Option 2 ID : 264330648691  
 Option 3 ID : 264330648693  
 Option 4 ID : 264330648692  
 Status : Not Answered  
 Chosen Option : --

Q.7 भारत की जनगणना 2011 के अनुसार राष्ट्रीय महिला श्रमबल भागीदारी दर (female workforce participation rate) क्या है?

- Ans
- 1. 53.03%
  - 2. 30.02%
  - 3. 25.51%
  - 4. 53.26%

Question ID : 264330166820  
 Option 1 ID : 264330654317  
 Option 2 ID : 264330654316  
 Option 3 ID : 264330654318  
 Option 4 ID : 264330654315  
 Status : Not Answered  
 Chosen Option : --

Q.8 कॉलम-A और कॉलम-B के बीच निम्नलिखित में से कौन सा सही मेल है?

कॉलम -A (चट्टान का प्रकार)

कॉलम -B (गठन की विधि)

- |                      |  |
|----------------------|--|
| i. अवसादी-चट्टान     | a. अन्य प्रकार की चट्टानों से अपने रासायनिक गुणों को रूपांतरित करके गठित |
| ii. कायांतरित चट्टान | b. पृथ्वी की सतह पर उत्क्षेपित या उत्सर्जित मैग्मा से व्युत्पन्न         |
| iii. आग्नेय चट्टान   | c. अन्य चट्टानों के टुकड़ों या पौधों या जानवरों के अवशेषों से गठित       |

- Ans
- 1. i-b, ii-a, iii-c
  - 2. i-a, ii-c, iii-b
  - 3. i-c, ii-a, iii-b
  - 4. i-a, ii-b, iii-c

Question ID : 264330111919  
 Option 1 ID : 264330439762  
 Option 2 ID : 264330439764  
 Option 3 ID : 264330439763  
 Option 4 ID : 264330439761  
 Status : Answered  
 Chosen Option : 3

Q.9 वातापी चालुक्य निम्नलिखित में से किस राजवंश के सहायक राजकुमार थे?

- Ans
- 1. पल्लव
  - 2. कदंब
  - 3. चोल
  - 4. कल्याणी के चालुक्य

Question ID : 264330106603  
 Option 1 ID : 264330418715  
 Option 2 ID : 264330418713  
 Option 3 ID : 264330418714  
 Option 4 ID : 264330418716  
 Status : Answered  
 Chosen Option : 4

Q.10 मुगल बादशाह जहांगीर से ईस्ट इंडिया कंपनी के लिए व्यापारिक रियायतें प्राप्त करने में कौन सफल हुआ था?

- Ans
- 1. कैप्टन बेस्ट
  - 2. जॉन मिल्डेनहॉल
  - 3. थॉमस रो
  - 4. कैप्टन हॉकिन्स

Question ID : 264330112187  
 Option 1 ID : 264330440834  
 Option 2 ID : 264330440835  
 Option 3 ID : 264330440836  
 Option 4 ID : 264330440833  
 Status : Answered  
 Chosen Option : 4

Q.11 हिमालय में, बढ़ती ऊंचाई के साथ तापमान में \_\_\_\_\_ वनस्पति में परिवर्तन का कारण बनती है।

- Ans
- 1. वृि
  - 2. कमी
  - 3. उतार-चढ़ाव
  - 4. स्थिरता

Question ID : 264330170002  
 Option 1 ID : 264330666684  
 Option 2 ID : 264330666683  
 Option 3 ID : 264330666686  
 Option 4 ID : 264330666685  
 Status : Answered  
 Chosen Option : 1

Q.12 निम्नलिखित में से कौन 20वीं शताब्दी में शास्त्रीय नृत्य की भरतनाट्यम शैली के प्रमुख प्रतिपादकों में से एक थीं?

- Ans
- 1. निर्मला मेहता
  - 2. बिजयिनी सत्पथी
  - 3. टी. बालासरस्वती
  - 4. कुमुदिनी लखिया

Question ID : 264330157015  
 Option 1 ID : 264330615438  
 Option 2 ID : 264330615437  
 Option 3 ID : 264330615436  
 Option 4 ID : 264330615435  
 Status : Answered  
 Chosen Option : 3

Q.13 अंतर्राष्ट्रीय योग दिवस कब मनाया जाता है?

- Ans
- 1. 22 जून को
  - 2. 21 जून को
  - 3. 23 जून को
  - 4. 20 जून को

Question ID : 264330110353  
 Option 1 ID : 264330433691  
 Option 2 ID : 264330433690  
 Option 3 ID : 264330433692  
 Option 4 ID : 264330433689  
 Status : Answered  
 Chosen Option : 2

Q.14 नवंबर 2022 में, भारत के 50वें मुख्य न्यायाधीश कौन बने?

- Ans
- 1. जस्टिस इंदिरा बनर्जी
  - 2. जस्टिस हेमंत गुप्ता
  - 3. जस्टिस एस. अब्दुल नज़ीर
  - 4. जस्टिस डी. वाई. चंद्रचूड़

Question ID : 264330158509  
 Option 1 ID : 264330621396  
 Option 2 ID : 264330621398  
 Option 3 ID : 264330621395  
 Option 4 ID : 264330621397  
 Status : Answered  
 Chosen Option : 4

Q.15 निम्नलिखित में से कौन सा स्थल-युग्म बौद्ध रेलिंग और प्रवेश द्वार के लिए प्रसिद्ध है?

- Ans
- 1. सारनाथ और कुशीनगर
  - 2. पारसनाथ और अजंता
  - 3. पटना और राजगीर
  - 4. भरहुत और अमरावती

Question ID : 264330141801

Option 1 ID : 264330555525

Option 2 ID : 264330555523

Option 3 ID : 264330555526

Option 4 ID : 264330555524

Status : Answered

Chosen Option : 1

Q.16 समुद्रगुप्त की उपलब्धियों को उनके दरबारी कवि, \_\_\_\_\_ द्वारा प्रशस्ति नामक एक लंबे शिलालेख में दर्ज किया गया है।

- Ans
- 1. हरिषेण
  - 2. कालिदास
  - 3. रुद्रसेन
  - 4. कल्हण

Question ID : 264330114811

Option 1 ID : 264330451331

Option 2 ID : 264330451332

Option 3 ID : 264330451329

Option 4 ID : 264330451330

Status : Answered

Chosen Option : 1

Q.17 When do the drugs used as medicines become potential poisons?

- Ans
- 1. When doses are taken at the recommended time and in the recommended quantity
  - 2. When doses are taken lower than recommended
  - 3. When doses are taken as recommended
  - 4. When doses are taken higher than recommended

Question ID : 264330111560

Option 1 ID : 264330438328

Option 2 ID : 264330438325

Option 3 ID : 264330438327

Option 4 ID : 264330438326

Status : Answered

Chosen Option : 4

Q.18 सरकारी बजट के संदर्भ में निम्नलिखित में से कौन-सा कथन असत्य है?

- Ans
- 1. संग्रह/वसूल किया गया शुल्क और जुर्माना पूंजीगत प्राप्ति का एक उदाहरण होता है।
  - 2. भारतीय रेलवे के माध्यम से अर्जित लाभ, गैर-कर राजस्व का एक हिस्सा होता है।
  - 3. राजस्व प्राप्ति के मामले में राशि वापस करने के लिए कोई भावी बाध्यता नहीं होती है।
  - 4. ऋण की वसूली एक पूंजीगत प्राप्ति होती है।

Question ID : 264330109079

Option 1 ID : 264330428596

Option 2 ID : 264330428595

Option 3 ID : 264330428593

Option 4 ID : 264330428594

Status : Not Answered

Chosen Option : --

Q.19 गुरु गंगाधर प्रधान पुरस्कार कला के किस क्षेत्र में दिया जाता है?

- Ans  1. नृत्य  
 2. रंगमंच  
 3. चित्रकारी  
 4. वस्त्र कला

Question ID : 264330130532  
 Option 1 ID : 264330511239  
 Option 2 ID : 264330511241  
 Option 3 ID : 264330511240  
 Option 4 ID : 264330511242  
 Status : Answered  
 Chosen Option : 3

Q.20 भारत सरकार अधिनियम, 1935 के अंतर्गत \_\_\_\_\_ में पहली बार प्रांतीय चुनाव हुए थे।

- Ans  1. 1937  
 2. 1936  
 3. 1938  
 4. 1935

Question ID : 264330111395  
 Option 1 ID : 264330437668  
 Option 2 ID : 264330437665  
 Option 3 ID : 264330437667  
 Option 4 ID : 264330437666  
 Status : Answered  
 Chosen Option : 3

Q.21 निम्नलिखित में से कौन-सा भारत में हरित क्रांति का सकारात्मक प्रभाव नहीं रहा?

- Ans  1. गैर-खाद्य अनाजों को बाहर रखा गया  
 2. औद्योगिक विकास हुआ  
 3. किसानों को लाभ हुआ  
 4. खाद्यान्न का आयात घटा

Question ID : 26433064538  
 Option 1 ID : 264330252747  
 Option 2 ID : 264330252746  
 Option 3 ID : 264330252745  
 Option 4 ID : 264330252744  
 Status : Answered  
 Chosen Option : 1

Q.22 जलवायु और मौसम में होने वाले सभी परिवर्तन \_\_\_\_\_ में होते हैं।

- Ans  1. मध्यमंडल  
 2. क्षोभमंडल  
 3. तापमंडल  
 4. समतापमंडल

Question ID : 264330117620  
 Option 1 ID : 264330462505  
 Option 2 ID : 264330462507  
 Option 3 ID : 264330462508  
 Option 4 ID : 264330462506  
 Status : Answered  
 Chosen Option : 2

Q.23 36वें राष्ट्रीय खेल 2022 में, किसे सर्वश्रेष्ठ पुरुष एथलीट घोषित किया गया?

- Ans
- 1. अमलान बोरगोहेन
  - 2. प्रवीण चित्रवेल
  - 3. साजन प्रकाश
  - 4. अंकुर गोयल

Question ID : 264330120051

Option 1 ID : 264330470460

Option 2 ID : 264330470459

Option 3 ID : 264330470462

Option 4 ID : 264330470461

Status : Answered

Chosen Option : 3

Q.24 प्रथम एशियाई खेल कब और कहाँ आयोजित किए गए थे?

- Ans
- 1. 1951 में, नई दिल्ली
  - 2. 1981 में, नई दिल्ली
  - 3. 1983 में, बांग्लादेश
  - 4. 1984 में, नेपाल

Question ID : 264330110363

Option 1 ID : 264330433731

Option 2 ID : 264330433730

Option 3 ID : 264330433732

Option 4 ID : 264330433729

Status : Answered

Chosen Option : 1

Q.25 सामान्य तौर पर क्रेकर, माइक्रोवेव पॉपकॉर्न, बटर और चिकन नगेट्स जैसे खाद्य पदार्थों में उपयोग किया जाने वाला कौन-सा संलिप्त सुगंधित कार्बनिक यौगिक, ऑक्सीजन की उपस्थिति में होने वाले भोजन के रासायनिक अपघटन को रोकता है?

- Ans
- 1. तृतीयक ब्यूटाइल हाइड्रोक्विनोन
  - 2. 1,4-डाइक्लोरोबेंजीन
  - 3. सोडियम हाइपोक्लोराइट
  - 4. डाइएथिलटोल्यूमाइड

Question ID : 264330131009

Option 1 ID : 264330513149

Option 2 ID : 264330513147

Option 3 ID : 264330513150

Option 4 ID : 264330513148

Status : Not Answered

Chosen Option : --

Q.26 बेनामी लेनदेन (निषेध) अधिनियम के कुछ प्रावधानों को सुप्रीम कोर्ट ने रद्द कर दिया था। यह कानून मूल रूप से किस वर्ष में अधिनियमित किया गया था?

- Ans  1. 1980  
 2. 1999  
 3. 1998  
 4. 1988

Question ID : 264330156982  
Option 1 ID : 264330615306  
Option 2 ID : 264330615305  
Option 3 ID : 264330615303  
Option 4 ID : 264330615304  
Status : Not Answered  
Chosen Option : --

Q.27 पद्म श्री से सम्मानित, भरतनाट्यम, कुचिपुड़ी और सत्रीया नृत्यों की अंतरराष्ट्रीय स्तर पर प्रशंसित प्रतिपादक, इंदिरा पी.पी. बोरा भारत के किस राज्य से संबंधित हैं?

- Ans  1. तमिलनाडु  
 2. असम  
 3. केरल  
 4. पश्चिम बंगाल

Question ID : 264330144843  
Option 1 ID : 264330567628  
Option 2 ID : 264330567627  
Option 3 ID : 264330567629  
Option 4 ID : 264330567630  
Status : Answered  
Chosen Option : 1

Q.28 पंडित रविशंकर किस वाद्य यंत्र के प्रतिपादक हैं?

- Ans  1. सरोद  
 2. सितार  
 3. वीणा  
 4. सारंगी

Question ID : 26433064242  
Option 1 ID : 264330251561  
Option 2 ID : 264330251563  
Option 3 ID : 264330251560  
Option 4 ID : 264330251562  
Status : Answered  
Chosen Option : 2

Q.29 निम्नलिखित में से किस शहर से राष्ट्रीय सुदूर संवेदन केंद्र, उपग्रह संचार के तहत डेटा के अधिग्रहण और इसके प्रसंस्करण की सुविधा प्रदान करता है?

- Ans
- 1. बंगलुरु
  - 2. हैदराबाद
  - 3. चेन्नई
  - 4. नई दिल्ली

Question ID : 264330163222

Option 1 ID : 264330640201

Option 2 ID : 264330640202

Option 3 ID : 264330640199

Option 4 ID : 264330640200

Status : Answered

Chosen Option : 3

Q.30 ऊतकीय परीक्षण के लिए कोशिका द्रव्य, लाल रक्त कणिकाओं, कोलेजन और पेशी तंतुओं को अभिरंजित करने के लिए इस्तेमाल किया जाने वाला उत्क्रमणीय, प्रतिदीप्तशील लाल, अम्लीय रंजक निम्नलिखित में से कौन-सा है?

- Ans
- 1. क्रिस्टल वायलेट (Crystal violet)
  - 2. इओसिन (Eosin)
  - 3. ऐलिजरिन (Alizarin)
  - 4. सैफ्रेनिन (Safranin)

Question ID : 264330113470

Option 1 ID : 264330445965

Option 2 ID : 264330445966

Option 3 ID : 264330445968

Option 4 ID : 264330445967

Status : Not Answered

Chosen Option : --

Q.31 मुलायम सिंह यादव (मरणोपरांत) को वर्ष 2023 के लिए निम्नलिखित में से किस नागरिक पुरस्कार से सम्मानित किया गया?

- Ans
- 1. पद्म भूषण
  - 2. पद्म श्री
  - 3. पद्म विभूषण
  - 4. भारत रत्न

Question ID : 264330133007

Option 1 ID : 264330521085

Option 2 ID : 264330521086

Option 3 ID : 264330521084

Option 4 ID : 264330521083

Status : Answered

Chosen Option : 3

Q.32 उच्च उपाज वाली किस्म के बीजों का संबंध निम्नलिखित में से किस देश से है, जिनका उपयोग हरित क्रांति क नीतियों के तहत भारत में किया गया था?

- Ans  1. संयुक्त राज्य अमेरिका  
 2. मेक्सिको  
 3. चीन  
 4. रूस

Question ID : 264330111754  
Option 1 ID : 264330439101  
Option 2 ID : 264330439102  
Option 3 ID : 264330439103  
Option 4 ID : 264330439104  
Status : Answered  
Chosen Option : 2

Q.33 कालिदास सम्मान की आवृत्ति क्या है?

- Ans  1. साल में एक बार  
 2. दो साल में एक बार  
 3. तीन साल में एक बार  
 4. पाँच साल में एक बार

Question ID : 264330157020  
Option 1 ID : 264330615455  
Option 2 ID : 264330615456  
Option 3 ID : 264330615457  
Option 4 ID : 264330615458  
Status : Not Answered  
Chosen Option : --

Q.34 सोहराई, करम और जावा त्योहार भारत के किस राज्य में मनाए जाते हैं?

- Ans  1. झारखंड  
 2. हरियाणा  
 3. आंध्र प्रदेश  
 4. राजस्थान

Question ID : 264330111160  
Option 1 ID : 264330436727  
Option 2 ID : 264330436726  
Option 3 ID : 264330436725  
Option 4 ID : 264330436728  
Status : Answered  
Chosen Option : 1

Q.35 इनमें से कौन 'मैन्स सर्च फॉर मीनिंग' ('Man's Search for Meaning') के/की रचनाकार हैं?

- Ans  1. अल्फ्रेड लैंसिंग  
 2. विक्टर ई फ्रैंकल  
 3. एली वीज़ल  
 4. एडिथ ईगर

Question ID : 264330144840  
Option 1 ID : 264330567617  
Option 2 ID : 264330567615  
Option 3 ID : 264330567616  
Option 4 ID : 264330567618  
Status : Not Answered  
Chosen Option : --

Q.36 कार्बन के अपररूपों के संबंध में असंगत शब्द की पहचान कीजिए।

- Ans
- 1. हीरा
  - 2. ग्रेफाइट
  - 3. टंगस्टन
  - 4. बकमिंस्टर फुलेरीन

Question ID : 264330134858

Option 1 ID : 264330528370

Option 2 ID : 264330528369

Option 3 ID : 264330528367

Option 4 ID : 264330528368

Status : Answered

Chosen Option : 3

Q.37 \_\_\_\_\_, चलनिधि समायोजन सुविधा (LAF) के तहत आने वाला एक साधन है, जिसपर आरबीआई (RBI) वाणिज्यिक बैंकों को उधार देता है।

- Ans
- 1. आरक्षित नकदी निधि अनुपात
  - 2. बैंक दर
  - 3. रेपो दर
  - 4. रिवर्स रेपो दर

Question ID : 264330109976

Option 1 ID : 264330432184

Option 2 ID : 264330432181

Option 3 ID : 264330432182

Option 4 ID : 264330432183

Status : Answered

Chosen Option : 3

Q.38 1941 में जहाज निर्माण उद्योग निम्नलिखित में से किस स्थान पर शुरू हुआ था?

- Ans
- 1. एलुरु
  - 2. विशाखापट्टनम
  - 3. कुरनूल
  - 4. दामोदर

Question ID : 264330163214

Option 1 ID : 264330640170

Option 2 ID : 264330640169

Option 3 ID : 264330640167

Option 4 ID : 264330640168

Status : Answered

Chosen Option : 2

Q.39 निम्नलिखित में से कौन-सा आवश्यक सूक्ष्म पोषक तत्व हेक्सामेरिक रूप में इंसुलिन के संश्लेषण, भंडारण और स्राव के साथ-साथ इंसुलिन की गठनात्मक अखंडता में एक स्पष्ट भूमिका निभाता है?

- Ans
- 1. फॉस्फोरस
  - 2. जिंक
  - 3. सिलीनियम
  - 4. फ्लोराइड

Question ID : 264330113464  
 Option 1 ID : 264330445943  
 Option 2 ID : 264330445941  
 Option 3 ID : 264330445942  
 Option 4 ID : 264330445944  
 Status : Answered  
 Chosen Option : 2

Q.40 भारत के प्रथम रक्षा मंत्री कौन थे?

- Ans
- 1. स्वर्ण सिंह
  - 2. बलदेव सिंह
  - 3. वाई.बी. चव्हाण
  - 4. कैलाश नाथ काटजू

Question ID : 264330133076  
 Option 1 ID : 264330521357  
 Option 2 ID : 264330521356  
 Option 3 ID : 264330521355  
 Option 4 ID : 264330521358  
 Status : Not Answered  
 Chosen Option : --

Q.41 पारिवारिक न्यायालय (संशोधन) विधेयक, 2022 निम्नलिखित में से किन राज्यों से संबंधित है?

- Ans
- 1. हिमाचल प्रदेश और उत्तराखंड
  - 2. त्रिपुरा और असम
  - 3. नागालैंड और हिमाचल प्रदेश
  - 4. नागालैंड और त्रिपुरा

Question ID : 264330158486  
 Option 1 ID : 264330621306  
 Option 2 ID : 264330621304  
 Option 3 ID : 264330621305  
 Option 4 ID : 264330621303  
 Status : Not Answered  
 Chosen Option : --

Q.42 शतरंज के खेल का नियम कि 'यह किसी भी दिशा में केवल एक वर्ग चल सकता है' किस पर लागू होता है?

- Ans
- 1. बादशाह (The King)
  - 2. वज़ीर (The Queen)
  - 3. हाथी (The Rook)
  - 4. ऊंट (The Bishop)

Question ID : 264330109856  
 Option 1 ID : 264330431701  
 Option 2 ID : 264330431702  
 Option 3 ID : 264330431703  
 Option 4 ID : 264330431704  
 Status : Answered  
 Chosen Option : 2

Q.43 वर्ष 2022 में पद्म श्री पुरस्कार से सम्मानित माधुरी बड़थवाल \_\_\_\_\_ के क्षेत्र में अपने योगदान के लिए प्रसिद्ध हैं।

- Ans  1. गढ़वाली लोक संगीत  
 2. कश्मीरी लोक संगीत  
 3. पंजाबी लोक संगीत  
 4. बुंदेलखंडी लोक संगीत

Question ID : 26433064635  
Option 1 ID : 264330253133  
Option 2 ID : 264330253135  
Option 3 ID : 264330253132  
Option 4 ID : 264330253134  
Status : Answered  
Chosen Option : 4

Q.44 'द लास्ट सॉना ऑफ डस्क' किसका पहला उपन्यास है?

- Ans  1. इरा त्रिवेदी  
 2. सिद्धार्थ धनवंत सांघवी  
 3. निकिता सिंह  
 4. रविंदर सिंह

Question ID : 26433071714  
Option 1 ID : 264330281282  
Option 2 ID : 264330281281  
Option 3 ID : 264330281280  
Option 4 ID : 264330281283  
Status : Not Answered  
Chosen Option : --

Q.45 निम्नलिखित में से कौन-सा अनुच्छेद राज्य को सामाजिक और सांस्कृतिक रूप से पिछड़े वर्गों और अनुसूचित जातियों तथा अनुसूचित जनजातियों के लोगों की कुछ श्रेणियों के उत्थान के लिए प्रावधान करने की अनुमति देता है?

- Ans  1. अनुच्छेद 17  
 2. अनुच्छेद 15  
 3. अनुच्छेद 16  
 4. अनुच्छेद 14

Question ID : 264330112775  
Option 1 ID : 264330443188  
Option 2 ID : 264330443186  
Option 3 ID : 264330443187  
Option 4 ID : 264330443185  
Status : Answered  
Chosen Option : 1

Q.46 क्रिस्टियानो रोनाल्डो का संबंध किस देश से है?

- Ans
- 1. जर्मनी
  - 2. ब्राजील
  - 3. पुर्तगाल
  - 4. अर्जेंटीना

Question ID : 264330110357  
 Option 1 ID : 264330433708  
 Option 2 ID : 264330433705  
 Option 3 ID : 264330433707  
 Option 4 ID : 264330433706  
 Status : Answered  
 Chosen Option : 3

Q.47 'पारो त्सेचु', \_\_\_\_\_ में सबसे लोकप्रिय त्योहारों में से एक है।

- Ans
- 1. मालदीव
  - 2. म्यांमार
  - 3. भूटान
  - 4. चीन

Question ID : 264330119833  
 Option 1 ID : 264330469607  
 Option 2 ID : 264330469610  
 Option 3 ID : 264330469609  
 Option 4 ID : 264330469608  
 Status : Answered  
 Chosen Option : 3

Q.48 'शहरी स्वरोजगार कार्यक्रम' और 'शहरी मजदूरी रोजगार कार्यक्रम' भारत के किस गरीबी उन्मूलन कार्यक्रम के दो विशेष घटक हैं?

- Ans
- 1. प्रधानमंत्री ग्रामोदय योजना
  - 2. ग्रामीण रोजगार सृजन कार्यक्रम
  - 3. स्वर्ण जयंती शहरी रोजगार योजना
  - 4. अंत्योदय अन्न योजना

Question ID : 264330130599  
 Option 1 ID : 264330511508  
 Option 2 ID : 264330511509  
 Option 3 ID : 264330511510  
 Option 4 ID : 264330511507  
 Status : Answered  
 Chosen Option : 3

Q.49 भारत के आर्द्र पर्णपाती वनों के बारे में निम्नलिखित में से कौन-सा कथन सत्य नहीं है?

- Ans
- 1. ये 100-200 cm वर्षा वाले क्षेत्रों में उगते हैं।
  - 2. साल, आंवला, शीशम और महुआ इन वनों की कुछ मुख्य प्रजातियाँ हैं।
  - 3. ये बिहार और उत्तर प्रदेश के मैदानी इलाकों में पाए जाते हैं।
  - 4. ये हिमालय की तलहटी में पाए जाते हैं।

Question ID : 264330166805  
 Option 1 ID : 264330654255  
 Option 2 ID : 264330654257  
 Option 3 ID : 264330654256  
 Option 4 ID : 264330654258  
 Status : Answered  
 Chosen Option : 3

Q.50 परमाणु क्रमांक को निरूपित करने के लिए हेनरी मोसले (Henry Moseley) ने किस प्रतीक का उपयोग किया था?

- Ans  1. U  
 2. M  
 3. A  
 4. Z

Question ID : 264330137303  
 Option 1 ID : 264330537841  
 Option 2 ID : 264330537842  
 Option 3 ID : 264330537840  
 Option 4 ID : 264330537839  
 Status : Answered  
 Chosen Option : 4

Section : English Language and Comprehension

Q.1 Identify the ANTONYM of the following word in the given sentence.

Lethargy

The usually circumspect personnel's vigour for his duty was visible in his dealing with customers.

- Ans  1. circumspect  
 2. vigour  
 3. visible  
 4. usually

Question ID : 264330135896  
 Option 1 ID : 264330532440  
 Option 2 ID : 264330532441  
 Option 3 ID : 264330532442  
 Option 4 ID : 264330532439  
 Status : Answered  
 Chosen Option : 2

Q.2 Select the most appropriate meaning of the underlined idiom in the following sentence.

After having worked on the study non-stop for twenty-three years, Harvey finally called it a day last week.

- Ans  1. Started a new job  
 2. Decided to revise  
 3. Stopped working on something  
 4. Honed a new skill

Question ID : 264330168045  
 Option 1 ID : 264330659068  
 Option 2 ID : 264330659067  
 Option 3 ID : 264330659069  
 Option 4 ID : 264330659070  
 Status : Answered  
 Chosen Option : 3

Q.3 Select the most appropriate synonym of the underlined word in the following sentence.

The coach's instructions were concise, providing clear guidance to the team.

- Ans
- 1. Lengthy
  - 2. Many
  - 3. Brief
  - 4. Verbose

Question ID : 264330164642  
Option 1 ID : 264330645747  
Option 2 ID : 264330645750  
Option 3 ID : 264330645749  
Option 4 ID : 264330645748  
Status : Answered  
Chosen Option : 3

Q.4 Select the most appropriate ANTONYM of the given word.  
Mitigate

- Ans
- 1. Aggravate
  - 2. Mend
  - 3. Sharpen
  - 4. Reform

Question ID : 264330165264  
Option 1 ID : 264330648149  
Option 2 ID : 264330648147  
Option 3 ID : 264330648150  
Option 4 ID : 264330648148  
Status : Answered  
Chosen Option : 1

Q.5 Select the option that expresses the given sentence in passive voice.  
You should eat fresh fruits.

- Ans
- 1. Fresh fruits should eat by you.
  - 2. Fresh fruits should be eat by you.
  - 3. Fresh fruits should be ate by you.
  - 4. Fresh fruits should be eaten by you.

Question ID : 264330132777  
Option 1 ID : 264330520204  
Option 2 ID : 264330520206  
Option 3 ID : 264330520205  
Option 4 ID : 264330520203  
Status : Answered  
Chosen Option : 4

Q.6 In the following questions a statement has been given with highlighted text. Select the options that can replace the text with correct idiom or phrase.  
The trainee performed the task with extreme ease.

- Ans  1. At the eleventh hour  
 2. A piece of cake  
 3. Swan song  
 4. Call it a day

Question ID : 264330120756  
Option 1 ID : 264330473240  
Option 2 ID : 264330473239  
Option 3 ID : 264330473241  
Option 4 ID : 264330473242  
Status : Answered  
Chosen Option : 1

Q.7 Select the option that expresses the given sentence in active voice.  
Your homework must be completed before the deadline.

- Ans  1. Your homework must have been completed before the deadline.  
 2. You must have completed your homework before the deadline.  
 3. You must complete your homework before the deadline.  
 4. Your homework should be completed before the deadline.

Question ID : 264330164245  
Option 1 ID : 264330644211  
Option 2 ID : 264330644214  
Option 3 ID : 264330644212  
Option 4 ID : 264330644213  
Status : Answered  
Chosen Option : 3

Q.8 Parts of the following sentence have been given as options. One of them may contain an error. Select the part that contains the error from the given options. If you don't find any error, mark 'No error' as your answer.

I have never played a hero before, so I jump at the chance.

- Ans  1. a hero before  
 2. I have never played  
 3. So I jump at the chance  
 4. No error

Question ID : 26433090488  
Option 1 ID : 264330355402  
Option 2 ID : 264330355401  
Option 3 ID : 264330355403  
Option 4 ID : 264330355404  
Status : Answered  
Chosen Option : 3

Q.9 Select the most appropriate option to fill in the blank.  
Except the editing, all the other relevant parts of the movie \_\_\_\_\_.

- Ans  1. are excellent  
 2. was excellent  
 3. are being excellent  
 4. is excellent

Question ID : 264330117214  
Option 1 ID : 264330460919  
Option 2 ID : 264330460920  
Option 3 ID : 264330460918  
Option 4 ID : 264330460917  
Status : Answered  
Chosen Option : 1

Q.10 Select the most appropriate synonym of the underlined word to fill in the blank.

He has a melancholic temperament; he is often \_\_\_\_\_.

- Ans  1. gloomy  
 2. glad  
 3. enthusiastic  
 4. curious

Question ID : 264330164195  
Option 1 ID : 264330644030  
Option 2 ID : 264330644028  
Option 3 ID : 264330644029  
Option 4 ID : 264330644027  
Status : Answered  
Chosen Option : 2

Q.11 The following sentence has been split into four segments. Identify the segment that contains a grammatical error.  
I love the dogs /; but I don't like / the dog my friend Tinzie / owns since it bites people.

- Ans  1. the dog my friend Tinzie  
 2. ; but I don't like  
 3. owns since it bites people  
 4. I love the dogs

Question ID : 264330137224  
Option 1 ID : 264330537529  
Option 2 ID : 264330537528  
Option 3 ID : 264330537530  
Option 4 ID : 264330537527  
Status : Answered  
Chosen Option : 3

Q.12 Select the most appropriate option to fill in the blank.

No parents \_\_\_\_\_ to see their children ruin their future.

- Ans  1. wish  
 2. predict  
 3. think  
 4. visualise

Question ID : 26433098895  
Option 1 ID : 264330388235  
Option 2 ID : 264330388236  
Option 3 ID : 264330388234  
Option 4 ID : 264330388233  
Status : Answered  
Chosen Option : 3

Q.13 Select the most appropriate option that can substitute the underlined segment in the given sentence.

When Shruti called Naufal, he was given the team a briefing of the project.

- Ans  1. was gave the team a briefing of  
 2. has been giving the team a briefing of  
 3. was giving the team a briefing of  
 4. had been given the team a briefing of

Question ID : 264330100999  
Option 1 ID : 264330396541  
Option 2 ID : 264330396542  
Option 3 ID : 264330396544  
Option 4 ID : 264330396543  
Status : Answered  
Chosen Option : 2

Q.14 Select the most appropriate option that can substitute the underlined segment in the given sentence.

She is too good and real.

- Ans  1. too good to be real  
 2. very good but real  
 3. more good and real  
 4. too good but real

Question ID : 264330117269  
Option 1 ID : 264330461134  
Option 2 ID : 264330461136  
Option 3 ID : 264330461133  
Option 4 ID : 264330461135  
Status : Answered  
Chosen Option : 1

Q.15 Select the option that expresses the following sentence in passive voice.  
Agnes composed a song for her father's birthday.

- Ans
- 1. A song was being composed by Agnes for her father's birthday.
  - 2. A song had been composed by Agnes for her father's birthday.
  - 3. A song was composed by Agnes for her father's birthday.
  - 4. A song would have been composed by Agnes for her father's birthday.

Question ID : 264330164386  
Option 1 ID : 264330644757  
Option 2 ID : 264330644755  
Option 3 ID : 264330644756  
Option 4 ID : 264330644758  
Status : Answered  
Chosen Option : 3

Q.16 Sentences of a paragraph are given below in jumbled order. Arrange the sentences in the correct order to form a meaningful and coherent paragraph.

- A. It marked the 5th World Council for the Welfare of the Blind in Sao Paulo.
- B. The first Braille stamp was published by Canada Post in 2008.
- C. Brazil, however, purchased the first raised-dot Braille stamp in the world in 1974.
- D. It featured a yellow Labrador retriever guide dog, a species that is frequently used to assist the blind.

- Ans
- 1. ABCD
  - 2. CBAD
  - 3. BDCA
  - 4. DCAB

Question ID : 26433098151  
Option 1 ID : 264330385257  
Option 2 ID : 264330385260  
Option 3 ID : 264330385258  
Option 4 ID : 264330385259  
Status : Answered  
Chosen Option : 2

Q.17 Select the most appropriate ANTONYM of the given word.  
Carry

- Ans
- 1. Leave
  - 2. Haul
  - 3. Take
  - 4. Transfer

Question ID : 264330168296  
Option 1 ID : 264330660050  
Option 2 ID : 264330660047  
Option 3 ID : 264330660049  
Option 4 ID : 264330660048  
Status : Answered  
Chosen Option : 1

Q.18 The following sentence has been split into four segments. Identify the segment that contains a grammatical error.

I do not like / your paying / for the food / every time.

- Ans
- 1. I do not like
  - 2. for the food
  - 3. every time
  - 4. your paying

Question ID : 264330102135

Option 1 ID : 264330401005

Option 2 ID : 264330401007

Option 3 ID : 264330401008

Option 4 ID : 264330401006

Status : Answered

Chosen Option : 4

Q.19 Select the option that expresses the given sentence in passive voice.  
Those kids always watch cartoon movies.

- Ans
- 1. Cartoon movies were watched by those kids always.
  - 2. Cartoon movies are watching by those kids always.
  - 3. Cartoon movies are watched by those kids always.
  - 4. Cartoon movies watched by those kids always.

Question ID : 264330164357

Option 1 ID : 264330644640

Option 2 ID : 264330644642

Option 3 ID : 264330644639

Option 4 ID : 264330644641

Status : Answered

Chosen Option : 3

Q.20 Select the most appropriate option that can substitute the underlined segment in the given sentence.

Some teachers often praise their pupils' efforts while some use ridicule and irony.

- Ans
- 1. vigilant
  - 2. abuse
  - 3. appreciation
  - 4. sarcasm

Question ID : 264330117323

Option 1 ID : 264330461349

Option 2 ID : 264330461351

Option 3 ID : 264330461352

Option 4 ID : 264330461350

Status : Answered

Chosen Option : 2

Q.21 Select the most appropriate option that can substitute the underlined segment in the given sentence.

River rafting is an adventure sport in which a group of five people levitate through a river in an inflatable raft.

- Ans  1. navigate through a river  
 2. alleviate through a river  
 3. deviate through a river  
 4. assemble through a river

Question ID : 26433096164  
Option 1 ID : 264330377427  
Option 2 ID : 264330377426  
Option 3 ID : 264330377425  
Option 4 ID : 264330377428  
Status : Answered  
Chosen Option : 2

Q.22 Select the option that expresses the following sentence in direct speech.

He requested him to wait there till he returned.

- Ans  1. He said to him, "Please wait here till I return."  
 2. "Wait here till I return please!" he ordered.  
 3. He asked him to wait here till here returns.  
 4. "Till he returns, please wait here," he requested.

Question ID : 264330164202  
Option 1 ID : 264330644058  
Option 2 ID : 264330644055  
Option 3 ID : 264330644056  
Option 4 ID : 264330644057  
Status : Answered  
Chosen Option : 1

Q.23 The following sentence has been split into four segments. Identify the segment that contains a grammatical error.  
Please tell me the truth, / is he here to have been investigating / the murder that / happened across the street?

- Ans  1. is he here to have been investigating  
 2. happened across the street  
 3. Please tell me the truth,  
 4. the murder that

Question ID : 264330133410  
Option 1 ID : 264330522672  
Option 2 ID : 264330522674  
Option 3 ID : 264330522671  
Option 4 ID : 264330522673  
Status : Answered  
Chosen Option : 1

Q.24 Select the most appropriate option to substitute the underlined segment in the given sentence.

Vishnu was happy to push the boat out for his fiancée's birthday.

- Ans
- 1. and felt so, that his heart started beating faster on
  - 2. but seemed like pretending on
  - 3. to take risks that could cause problems or danger on
  - 4. to spend a lot of money because he was celebrating

Question ID : 264330164687  
Option 1 ID : 264330645917  
Option 2 ID : 264330645918  
Option 3 ID : 264330645915  
Option 4 ID : 264330645916  
Status : Answered  
Chosen Option : 4

Q.25 Select the option that expresses the following sentence in direct speech.

The judge commanded them to call the first witness.

- Ans
- 1. The first witness was commanded to come in.
  - 2. "Call the first witness," said the judge.
  - 3. "Please call the first witness," the judge pleaded.
  - 4. The judge commanded the first witness to come in.

Question ID : 264330164201  
Option 1 ID : 264330644054  
Option 2 ID : 264330644052  
Option 3 ID : 264330644051  
Option 4 ID : 264330644053  
Status : Answered  
Chosen Option : 2

Q.26 Select the most appropriate ANTONYM of the given word.  
Advent

- Ans
- 1. Arrival
  - 2. Departure
  - 3. Experience
  - 4. Attraction

Question ID : 264330168280  
Option 1 ID : 264330659987  
Option 2 ID : 264330659989  
Option 3 ID : 264330659990  
Option 4 ID : 264330659988  
Status : Answered  
Chosen Option : 2

Q.27 Select the most appropriate ANTONYM of the given word.

Abundance

- Ans  1. Meagreness  
 2. Unpleasantness  
 3. Non-serious  
 4. Miser

Question ID : 264330137460

Option 1 ID : 264330538464

Option 2 ID : 264330538463

Option 3 ID : 264330538466

Option 4 ID : 264330538465

Status : Answered

Chosen Option : 1

Q.28 The following sentence has been divided into segments. One of them may contain an error. Select the segment that contains the error from the given options. If you don't find any error, mark 'No error' as your answer.

Ignoring the red flag / warning in the beach / is no joke.

- Ans  1. Ignoring the red flag  
 2. No Error  
 3. is no joke.  
 4. warning in the beach

Question ID : 26433096147

Option 1 ID : 264330377357

Option 2 ID : 264330377360

Option 3 ID : 264330377359

Option 4 ID : 264330377358

Status : Not Answered

Chosen Option : --

Q.29 Select the most appropriate option that can substitute the underlined segment in the given sentence.

The boy tried to complete the task on time because he didn't want to miss farther tasks.

- Ans  1. doesn't want to miss further tasks  
 2. didn't want to miss further tasks  
 3. doesn't want to miss farther tasks  
 4. didn't want of miss farther tasks

Question ID : 264330100993

Option 1 ID : 264330396518

Option 2 ID : 264330396520

Option 3 ID : 264330396517

Option 4 ID : 264330396519

Status : Answered

Chosen Option : 2

Q.30 Select the most appropriate option to fill in the blank.

The chemical spray is a very useful and distant weapon that may be used to attack from a long distance, \_\_\_\_\_ additional safety.

- Ans
- 1. minimising
  - 2. developing
  - 3. ensuring
  - 4. following

Question ID : 26433098917  
Option 1 ID : 264330388324  
Option 2 ID : 264330388322  
Option 3 ID : 264330388321  
Option 4 ID : 264330388323  
Status : Answered  
Chosen Option : 3

Q.31 Select the option that expresses the given sentence in active voice.

I was given this book by my English teacher.

- Ans
- 1. This book was given to me by my English teacher.
  - 2. My English teacher was given this book by me.
  - 3. My English teacher gave me this book.
  - 4. This book gave me my English teacher.

Question ID : 264330164592  
Option 1 ID : 264330645551  
Option 2 ID : 264330645553  
Option 3 ID : 264330645552  
Option 4 ID : 264330645554  
Status : Answered  
Chosen Option : 3

Q.32 Select the most appropriate ANTONYM of the given word.

Mercurial

- Ans
- 1. Bereaved
  - 2. Tranquil
  - 3. Flippant
  - 4. Salacious

Question ID : 264330168041  
Option 1 ID : 264330659053  
Option 2 ID : 264330659052  
Option 3 ID : 264330659054  
Option 4 ID : 264330659051  
Status : Not Answered  
Chosen Option : --

Q.33 Select the most appropriate option that can substitute the underlined segment in the given sentence.

The heart that is full of grieve is heavy.

- Ans
- 1. full of grieving
  - 2. full of grief
  - 3. filling with grief
  - 4. filled with grieve

Question ID : 264330117048

Option 1 ID : 264330460274

Option 2 ID : 264330460275

Option 3 ID : 264330460276

Option 4 ID : 264330460273

Status : Answered

Chosen Option : 4

Q.34 Identify the ANTONYM of the following word in the given sentence.

Furious

The frantic leader was outraged at the failure of his subordinate who unexpectedly was unperturbed.

- Ans
- 1. outraged
  - 2. frantic
  - 3. unperturbed
  - 4. failure

Question ID : 264330135897

Option 1 ID : 264330532444

Option 2 ID : 264330532443

Option 3 ID : 264330532446

Option 4 ID : 264330532445

Status : Answered

Chosen Option : 1

Q.35 Select the option that expresses the given sentence in active voice.

A story has been written by Sarath.

- Ans
- 1. Sarath wrote a story.
  - 2. Sarath has written a story.
  - 3. Sarath have written a story.
  - 4. Sarath was written by a story.

Question ID : 264330164354

Option 1 ID : 264330644630

Option 2 ID : 264330644629

Option 3 ID : 264330644628

Option 4 ID : 264330644627

Status : Answered

Chosen Option : 2

Q.36 Select the option that expresses the given sentence in active voice.

Human life will be prolonged by a new drug called new-med.

- Ans  1. A new drug called new-med will prolong human life.  
 2. A new drug called new-med was prolonging human life.  
 3. A new drug called new-med had prolonged human life.  
 4. A new drug called new-med is prolonging human life.

Question ID : 26433089121  
Option 1 ID : 264330350003  
Option 2 ID : 264330350002  
Option 3 ID : 264330350004  
Option 4 ID : 264330350001  
Status : Answered  
Chosen Option : 1

Q.37 Select the option that expresses the given sentence in passive voice.  
Look at the clock.

- Ans  1. Let looked at the clock.  
 2. Let the clock be looked at.  
 3. Let the clock look at.  
 4. Let the clock be look at.

Question ID : 264330132775  
Option 1 ID : 264330520196  
Option 2 ID : 264330520198  
Option 3 ID : 264330520197  
Option 4 ID : 264330520195  
Status : Answered  
Chosen Option : 2

Q.38 Select the option that changes the form of narration in the following sentence.

Rohan said, "I didn't tell any lie to anyone."

- Ans  1. Rohan said that he had not told any lie to anyone.  
 2. Rohan said that he did not tell any lie to anyone.  
 3. Rohan said that I had not told any lie to anyone.  
 4. Rohan said that I did not tell any lie to anyone.

Question ID : 264330163267  
Option 1 ID : 264330640381  
Option 2 ID : 264330640379  
Option 3 ID : 264330640380  
Option 4 ID : 264330640382  
Status : Answered  
Chosen Option : 1

Q.39 Sentences of a paragraph are given below in jumbled order. Arrange the sentences in the correct order to form a meaningful and coherent paragraph.

- A. Changes in the nature of light are brought on by the Raman Effect.
- B. It examines how light behaves when it passes through a solid, liquid, or gaseous transparent media.
- C. Similar to how a striker scatters coins on a carom board, the phenomenon occurs when light energy particles called photons are scattered by the medium's molecules.
- D. Understanding the molecular structure of chemical molecules requires knowledge of the Raman Effect.

- Ans
- 1. BCDA
  - 2. CABD
  - 3. ABCD
  - 4. CBDA

Question ID : 264330117158  
Option 1 ID : 264330460697  
Option 2 ID : 264330460700  
Option 3 ID : 264330460698  
Option 4 ID : 264330460699  
Status : Answered  
Chosen Option : 1

Q.40 Select the most appropriate option that can substitute the underlined segment in the given sentence.

To take my parents on a pilgrimage by plane is one of the goal of my life after getting my first salary.

- Ans
- 1. one in the goal of my life
  - 2. one of the goals of my life
  - 3. one of out of the goals of my life
  - 4. one of goal of my life

Question ID : 26433096160  
Option 1 ID : 264330377412  
Option 2 ID : 264330377411  
Option 3 ID : 264330377410  
Option 4 ID : 264330377409  
Status : Answered  
Chosen Option : 2

Q.41 Select the option that expresses the given sentence in passive voice.  
The company produces high-quality products.

- Ans
- 1. High-quality products are produced by the company.
  - 2. High-quality products are being produced by the company.
  - 3. High-quality products were produced by the company.
  - 4. High-quality products produced by the company.

Question ID : 264330168229  
Option 1 ID : 264330659792  
Option 2 ID : 264330659793  
Option 3 ID : 264330659791  
Option 4 ID : 264330659794  
Status : Answered  
Chosen Option : 1

Q.42 Select the most appropriate ANTONYM of the given word.

Duty

- Ans  1. Loophole  
 2. Option  
 3. Exemption  
 4. Selection

Question ID : 264330170181  
Option 1 ID : 264330667401  
Option 2 ID : 264330667399  
Option 3 ID : 264330667402  
Option 4 ID : 264330667400  
Status : Not Answered  
Chosen Option : --

Q.43 Select the most appropriate option that can substitute the underlined segment in the given sentence.

I am very tired and need a chair to sit.

- Ans  1. need a chair to sit on  
 2. need a chair to sit by  
 3. need a chair to sit with  
 4. need a chair to sit for

Question ID : 264330117268  
Option 1 ID : 264330461129  
Option 2 ID : 264330461130  
Option 3 ID : 264330461132  
Option 4 ID : 264330461131  
Status : Answered  
Chosen Option : 1

Q.44 Select the option that expresses the given sentence in direct speech.

The teacher reminded the students to submit their assignments by Friday.

- Ans  1. "Submit your assignments by Friday," reminded the teacher to the students.  
 2. "Submit your assignments by Friday," the teacher reminded the students.  
 3. "Submit your assignments by Friday," the students were instructed by the teacher.  
 4. "Submit your assignments by Friday," the students were reminded by the teacher.

Question ID : 264330137489  
Option 1 ID : 264330538575  
Option 2 ID : 264330538576  
Option 3 ID : 264330538578  
Option 4 ID : 264330538577  
Status : Answered  
Chosen Option : 2

Q.45 The following sentence has been split into four segments. Identify the segment that contains a grammatical error.  
The judge decided that / the defendant was guilty of all charges, / and that a punishment of five years / in prison were appropriate.

- Ans
- 1. and that a punishment of five years
  - 2. The judge decided that
  - 3. the defendant was guilty of all charges,
  - 4. in prison were appropriate

Question ID : 264330137470

Option 1 ID : 264330538501

Option 2 ID : 264330538499

Option 3 ID : 264330538500

Option 4 ID : 264330538502

Status : Answered

Chosen Option : 4

Q.46 Select the option that expresses the given sentence in direct speech.  
The travel agent asked whether I wanted to go by air or by sea.

- Ans
- 1. The travel agent asked, "Did you want to go by air or sea?"
  - 2. The travel agent asked, "How did you want to go by air or sea?"
  - 3. The travel agent asked, "Did he want to go by air or sea?"
  - 4. The travel agent asked, "Do you want to go by air or sea?"

Question ID : 264330137437

Option 1 ID : 264330538376

Option 2 ID : 264330538377

Option 3 ID : 264330538375

Option 4 ID : 264330538378

Status : Answered

Chosen Option : 4

Q.47 Select the option that changes the form of narration in the following sentence.

The priest said to the convict, "Are you not ashamed of your misdeed?"

- Ans
- 1. The priest enquired the convict of whether she is not ashamed of her misdeed.
  - 2. The priest enquired of the convict if she was not ashamed of her misdeed.
  - 3. The priest enquired of the convict that she was not ashamed of her misdeed.
  - 4. The priest enquired of the convict if was she not ashamed of her misdeed.

Question ID : 264330163268

Option 1 ID : 264330640385

Option 2 ID : 264330640383

Option 3 ID : 264330640384

Option 4 ID : 264330640386

Status : Answered

Chosen Option : 2

Q.48 Select the most appropriate option to fill in the blank.

Dust has \_\_\_\_\_ in the crevices of the house.

- Ans
- 1. flown
  - 2. gathered
  - 3. lived
  - 4. assembled

Question ID : 26433098897  
Option 1 ID : 264330388241  
Option 2 ID : 264330388242  
Option 3 ID : 264330388244  
Option 4 ID : 264330388243  
Status : Answered  
Chosen Option : 2

Q.49 Select the most appropriate meaning for the given idiom.  
Fall into line

- Ans
- 1. Straight road to walk
  - 2. Fuming and shouting
  - 3. Adhere to rules
  - 4. Searching something

Question ID : 264330168304  
Option 1 ID : 264330660082  
Option 2 ID : 264330660081  
Option 3 ID : 264330660080  
Option 4 ID : 264330660079  
Status : Answered  
Chosen Option : 4

Q.50 The following sentence has been divided into parts. One of them may contain an error.  
Select the part that contains the error from the given options. If you don't find any error, mark 'No error' as your answer.  
If you permit me, / I will bring and show / all my drawings to you.

- Ans
- 1. all my drawings to you
  - 2. I will bring and show
  - 3. No error
  - 4. If you permit me,

Question ID : 264330139154  
Option 1 ID : 264330545193  
Option 2 ID : 264330545192  
Option 3 ID : 264330545194  
Option 4 ID : 264330545191  
Status : Answered  
Chosen Option : 3

Q.51 Select the most appropriate option to fill in the blank.

The most evident reason for cases pending in the Indian judiciary is an \_\_\_\_\_ representation of judges.

- Ans
- 1. insufficient
  - 2. optimised
  - 3. adequate
  - 4. unlawful

Question ID : 26433098915  
Option 1 ID : 264330388314  
Option 2 ID : 264330388316  
Option 3 ID : 264330388315  
Option 4 ID : 264330388313  
Status : Answered  
Chosen Option : 2

Q.52 Select the most appropriate idiom for the underlined word segment.

Low count of sales, despite the sincere efforts of the sales executive, has put her team in a very difficult situation to escape from.

- Ans
- 1. Bury the hatchet
  - 2. In a tight corner
  - 3. Cut to the chase
  - 4. Right off the bat

Question ID : 264330167998  
Option 1 ID : 264330658886  
Option 2 ID : 264330658883  
Option 3 ID : 264330658885  
Option 4 ID : 264330658884  
Status : Answered  
Chosen Option : 2

Q.53 Sentences of a paragraph are given below in jumbled order. Arrange the sentences in the correct logical order to form a meaningful and coherent paragraph.

A.A variety of diseases can be linked to unsanitary conditions and careless garbage disposal.

B.People understand the value of cleanliness but they often forget that they are also responsible for the cleanliness of the environment, that they are accountable for whatever waste they make and that simply getting rid of it from their homes will not help.

C.A clean and green environment is a fundamental tenet of sustainable development.

D.It could be due to a lack of information, pure laziness, or recklessness. Sometimes all it takes is a gentle nudge.

- Ans
- 1. BDCA
  - 2. CBDA
  - 3. ACDB
  - 4. CABD

Question ID : 264330117484  
Option 1 ID : 264330461962  
Option 2 ID : 264330461961  
Option 3 ID : 264330461963  
Option 4 ID : 264330461964  
Status : Answered  
Chosen Option : 4

Q.54 Select the most appropriate meaning of the given idiom.  
Up in arms

- Ans  1. Doing exercise  
 2. Unable to do something  
 3. Standing tall  
 4. Ready to fight

Question ID : 264330135899  
Option 1 ID : 264330532451  
Option 2 ID : 264330532454  
Option 3 ID : 264330532453  
Option 4 ID : 264330532452  
Status : Answered  
Chosen Option : 2

Q.55 Select the option that can substitute the bracketed word segment correctly and complete the following sentence meaningfully.  
They didn't see you coming here, (is it)?

- Ans  1. did they  
 2. did you  
 3. didn't they  
 4. didn't you

Question ID : 264330134147  
Option 1 ID : 264330525611  
Option 2 ID : 264330525613  
Option 3 ID : 264330525612  
Option 4 ID : 264330525614  
Status : Answered  
Chosen Option : 1

Q.56 Select the most appropriate option that can substitute the underlined segment in the given sentence.  
Drop me a message when the food will be ready.

- Ans  1. the food is ready  
 2. the food will be prepared  
 3. the food shall be ready  
 4. the food will ready

Question ID : 264330117264  
Option 1 ID : 264330461115  
Option 2 ID : 264330461116  
Option 3 ID : 264330461114  
Option 4 ID : 264330461113  
Status : Answered  
Chosen Option : 2

Q.57 Select the most appropriate preposition to fill in the blank.  
Are you afraid \_\_\_\_\_ the dark?

- Ans  1. of  
 2. at  
 3. on  
 4. to

Question ID : 264330164312  
Option 1 ID : 264330644466  
Option 2 ID : 264330644463  
Option 3 ID : 264330644465  
Option 4 ID : 264330644464  
Status : Answered  
Chosen Option : 1

Q.58 Sentences of a paragraph are given below in jumbled order. Arrange the sentences in the correct order to form a meaningful and coherent paragraph.

- A.Targeted advertising is playing an increasingly important role in social media marketing.  
B.It wasn't until a few years ago that people began to perceive social media as a marketing tool.  
C.Social media has long been regarded as a means of communicating with people via instant messaging and blogging.  
D.In marketing, social media is a quick and easy means to share a company's information, such as advertising and products or services available to customers.

- Ans  1. CBDA  
 2. ACDB  
 3. DBCA  
 4. DCBA

Question ID : 26433097528  
Option 1 ID : 264330382787  
Option 2 ID : 264330382786  
Option 3 ID : 264330382788  
Option 4 ID : 264330382785  
Status : Answered  
Chosen Option : 4

Q.59 Select the option that expresses the given sentence in direct speech.

The teacher told the students that she had waited for them for about 15 minutes before leaving the class.

- Ans  1. The teacher said to the students, "I could waited for you for about 15 minutes before leaving the class."  
 2. The teacher said to the students, "I waited for you for about 15 minutes before leaving the class."  
 3. The teacher says, "I had waited for you for about 15 minutes before leaving the class."  
 4. The teacher had said, "I had waited for you for about 15 minutes before leaving the class."

Question ID : 26433099081  
Option 1 ID : 264330388957  
Option 2 ID : 264330388960  
Option 3 ID : 264330388958  
Option 4 ID : 264330388959  
Status : Answered  
Chosen Option : 2

Q.60 Select the option that expresses the given sentence in indirect speech.  
She said, "I will dance tomorrow."

- Ans  1. She said that she would dance the next day.  
 2. She said that she will dance tomorrow.  
 3. She said she would dance the next day.  
 4. She said that she would dance tomorrow.

Question ID : 264330168351  
Option 1 ID : 264330660270  
Option 2 ID : 264330660267  
Option 3 ID : 264330660269  
Option 4 ID : 264330660268  
Status : Answered  
Chosen Option : 1

Q.61 Select the option that expresses the given sentence in direct speech.  
Manas said that Sooraj had arrived on Friday.

- Ans  1. Manas say, "Sooraj arriving on Friday."  
 2. Manas said, "Sooraj arrived on Friday."  
 3. Manas says, "Sooraj has be arrives on Friday."  
 4. Manas says, "Sooraj is arrived on Friday."

Question ID : 264330135986  
Option 1 ID : 264330532787  
Option 2 ID : 264330532788  
Option 3 ID : 264330532790  
Option 4 ID : 264330532789  
Status : Answered  
Chosen Option : 2

Q.62 Select the most appropriate ANTONYM of the given word.  
Grandeur

- Ans  1. Permission  
 2. Greatness  
 3. Assignment  
 4. Insignificance

Question ID : 264330139384  
Option 1 ID : 264330545988  
Option 2 ID : 264330545990  
Option 3 ID : 264330545989  
Option 4 ID : 264330545987  
Status : Answered  
Chosen Option : 4

Q.63 The following sentence has been split into four segments. Identify the segment that contains a grammatical error.

The school authorities are / decided to close the high school / wing for the next three days / due to power failure.

- Ans
- 1. decided to close the high school
  - 2. due to power failure
  - 3. wing for the next three days
  - 4. The school authorities are

Question ID : 26433091955  
Option 1 ID : 264330361158  
Option 2 ID : 264330361160  
Option 3 ID : 264330361159  
Option 4 ID : 264330361157  
Status : Not Answered  
Chosen Option : --

Q.64 Select the most appropriate option that can substitute the underlined segment in the given sentence. If there is no need to substitute it, select 'No substitution required'.

Though I was not happy, I went to the reception because of the sake of my friend.

- Ans
- 1. I have gone to the reception because of the sake of my friend
  - 2. I went for the reception for the sake of my friend
  - 3. I went to the reception for the sake of my friend
  - 4. I will go to the reception for the sake of my friend

Question ID : 26433091874  
Option 1 ID : 264330360836  
Option 2 ID : 264330360835  
Option 3 ID : 264330360833  
Option 4 ID : 264330360834  
Status : Answered  
Chosen Option : 3

Q.65 Select the most appropriate option that can substitute the underlined segment in the given sentence.

He asked me what is my name?

- Ans
- 1. what was my name?
  - 2. what is my name.
  - 3. what my name has been.
  - 4. what my name was.

Question ID : 264330117259  
Option 1 ID : 264330461095  
Option 2 ID : 264330461094  
Option 3 ID : 264330461096  
Option 4 ID : 264330461093  
Status : Answered  
Chosen Option : 4

**Comprehension:**

In the following passage, some words have been deleted. Read the passage carefully and select the most appropriate option to fill in each blank.

Cambridge University Press (1)\_\_\_\_\_ no responsibility for the persistence or accuracy of URLs for external or third-party internet websites referred to in (2)\_\_\_\_\_ publication, and (3)\_\_\_\_\_ guarantee that any content on such websites is, or will remain, accurate or appropriate. Information (4)\_\_\_\_\_ prices, travel timetables and other factual (5)\_\_\_\_\_ given in this work is correct at the time of first printing.

**SubQuestion No : 66**

**Q.66** Select the most appropriate option to fill in blank no.1.

- Ans  1. have  
 2. has  
 3. had  
 4. and

Question ID : 264330167897  
Option 1 ID : 264330658512  
Option 2 ID : 264330658511  
Option 3 ID : 264330658513  
Option 4 ID : 264330658514  
Status : Answered  
Chosen Option : 2

**Comprehension:**

In the following passage, some words have been deleted. Read the passage carefully and select the most appropriate option to fill in each blank.

Cambridge University Press (1)\_\_\_\_\_ no responsibility for the persistence or accuracy of URLs for external or third-party internet websites referred to in (2)\_\_\_\_\_ publication, and (3)\_\_\_\_\_ guarantee that any content on such websites is, or will remain, accurate or appropriate. Information (4)\_\_\_\_\_ prices, travel timetables and other factual (5)\_\_\_\_\_ given in this work is correct at the time of first printing.

**SubQuestion No : 67**

**Q.67** Select the most appropriate option to fill in blank no.2.

- Ans  1. that  
 2. there  
 3. this  
 4. here

Question ID : 264330167898  
Option 1 ID : 264330658515  
Option 2 ID : 264330658517  
Option 3 ID : 264330658516  
Option 4 ID : 264330658518  
Status : Answered  
Chosen Option : 3

**Comprehension:**

In the following passage, some words have been deleted. Read the passage carefully and select the most appropriate option to fill in each blank.

Cambridge University Press (1)\_\_\_\_\_ no responsibility for the persistence or accuracy of URLs for external or third-party internet websites referred to in (2)\_\_\_\_\_ publication, and (3)\_\_\_\_\_ guarantee that any content on such websites is, or will remain, accurate or appropriate. Information (4)\_\_\_\_\_ prices, travel timetables and other factual (5)\_\_\_\_\_ given in this work is correct at the time of first printing.

**SubQuestion No : 68**

**Q.68** Select the most appropriate option to fill in blank no.3.

- Ans**  1. have not  
 2. does not  
 3. did not  
 4. do not

Question ID : 264330167899  
Option 1 ID : 264330658522  
Option 2 ID : 264330658520  
Option 3 ID : 264330658521  
Option 4 ID : 264330658519  
Status : Answered  
Chosen Option : 2

**Comprehension:**

In the following passage, some words have been deleted. Read the passage carefully and select the most appropriate option to fill in each blank.

Cambridge University Press (1)\_\_\_\_\_ no responsibility for the persistence or accuracy of URLs for external or third-party internet websites referred to in (2)\_\_\_\_\_ publication, and (3)\_\_\_\_\_ guarantee that any content on such websites is, or will remain, accurate or appropriate. Information (4)\_\_\_\_\_ prices, travel timetables and other factual (5)\_\_\_\_\_ given in this work is correct at the time of first printing.

**SubQuestion No : 69**

**Q.69** Select the most appropriate option to fill in blank no.4.

- Ans**  1. regarding  
 2. related  
 3. concerned  
 4. obstructing

Question ID : 264330167900  
Option 1 ID : 264330658526  
Option 2 ID : 264330658523  
Option 3 ID : 264330658524  
Option 4 ID : 264330658525  
Status : Answered  
Chosen Option : 1

**Comprehension:**

In the following passage, some words have been deleted. Read the passage carefully and select the most appropriate option to fill in each blank.

Cambridge University Press (1)\_\_\_\_\_ no responsibility for the persistence or accuracy of URLs for external or third-party internet websites referred to in (2)\_\_\_\_\_ publication, and (3)\_\_\_\_\_ guarantee that any content on such websites is, or will remain, accurate or appropriate. Information (4)\_\_\_\_\_ prices, travel timetables and other factual (5)\_\_\_\_\_ given in this work is correct at the time of first printing.

**SubQuestion No : 70**

**Q.70** Select the most appropriate option to fill in blank no.5.

- Ans** ✓ 1. information  
✗ 2. illustration  
✗ 3. opinions  
✗ 4. material

Question ID : 264330167901

Option 1 ID : 264330658529

Option 2 ID : 264330658530

Option 3 ID : 264330658528

Option 4 ID : 264330658527

Status : Answered

Chosen Option : 1

**Comprehension:**

In the following passage, some words have been deleted. Read the passage carefully and select the most appropriate option to fill in each blank.

(1)\_\_\_\_\_, there are numerous products available for customers to select from, whether they are using a physical store or (2)\_\_\_\_\_ online shopping platform. Almost every product or brand has (3)\_\_\_\_\_ own USP, packaging, colour combinations and more as marketing tactics, which it uses to market itself to the customers in a (4)\_\_\_\_\_ manner. Brands find it (5)\_\_\_\_\_ challenging to engage consumers as their attention spans are dwindling at an accelerated rate.

**SubQuestion No : 71**

**Q.71** Select the most appropriate option to fill in blank number 1.

- Ans** ✗ 1. Yesterday  
✗ 2. In future  
✓ 3. Today  
✗ 4. Long ago

Question ID : 264330167944

Option 1 ID : 264330658672

Option 2 ID : 264330658674

Option 3 ID : 264330658671

Option 4 ID : 264330658673

Status : Answered

Chosen Option : 3

**Comprehension:**

In the following passage, some words have been deleted. Read the passage carefully and select the most appropriate option to fill in each blank.

(1)\_\_\_\_\_, there are numerous products available for customers to select from, whether they are using a physical store or (2)\_\_\_\_\_ online shopping platform. Almost every product or brand has (3)\_\_\_\_\_ own USP, packaging, colour combinations and more as marketing tactics, which it uses to market itself to the customers in a (4)\_\_\_\_\_ manner. Brands find it (5)\_\_\_\_\_ challenging to engage consumers as their attention spans are dwindling at an accelerated rate.

**SubQuestion No : 72**

**Q.72** Select the most appropriate option to fill in blank number 2.

**Ans** ✓ 1. an

✗ 2. the

✗ 3. a

✗ 4. in

Question ID : 264330167945

Option 1 ID : 264330658675

Option 2 ID : 264330658677

Option 3 ID : 264330658676

Option 4 ID : 264330658678

Status : Answered

Chosen Option : 1

**Comprehension:**

In the following passage, some words have been deleted. Read the passage carefully and select the most appropriate option to fill in each blank.

(1)\_\_\_\_\_, there are numerous products available for customers to select from, whether they are using a physical store or (2)\_\_\_\_\_ online shopping platform. Almost every product or brand has (3)\_\_\_\_\_ own USP, packaging, colour combinations and more as marketing tactics, which it uses to market itself to the customers in a (4)\_\_\_\_\_ manner. Brands find it (5)\_\_\_\_\_ challenging to engage consumers as their attention spans are dwindling at an accelerated rate.

**SubQuestion No : 73**

**Q.73** Select the most appropriate option to fill in blank number 3.

**Ans** ✗ 1. their

✗ 2. there

✓ 3. its

✗ 4. it's

Question ID : 264330167946

Option 1 ID : 264330658679

Option 2 ID : 264330658680

Option 3 ID : 264330658681

Option 4 ID : 264330658682

Status : Answered

Chosen Option : 3

**Comprehension:**

In the following passage, some words have been deleted. Read the passage carefully and select the most appropriate option to fill in each blank.

(1)\_\_\_\_\_, there are numerous products available for customers to select from, whether they are using a physical store or (2)\_\_\_\_\_ online shopping platform. Almost every product or brand has (3)\_\_\_\_\_ own USP, packaging, colour combinations and more as marketing tactics, which it uses to market itself to the customers in a (4)\_\_\_\_\_ manner. Brands find it (5)\_\_\_\_\_ challenging to engage consumers as their attention spans are dwindling at an accelerated rate.

**SubQuestion No : 74**

**Q.74** Select the most appropriate option to fill in blank number 4.

**Ans** ✓ 1. unique

✗ 2. strangely

✗ 3. silent

✗ 4. minute

Question ID : 264330167947

Option 1 ID : 264330658685

Option 2 ID : 264330658683

Option 3 ID : 264330658684

Option 4 ID : 264330658686

Status : Answered

Chosen Option : 1

**Comprehension:**

In the following passage, some words have been deleted. Read the passage carefully and select the most appropriate option to fill in each blank.

(1)\_\_\_\_\_, there are numerous products available for customers to select from, whether they are using a physical store or (2)\_\_\_\_\_ online shopping platform. Almost every product or brand has (3)\_\_\_\_\_ own USP, packaging, colour combinations and more as marketing tactics, which it uses to market itself to the customers in a (4)\_\_\_\_\_ manner. Brands find it (5)\_\_\_\_\_ challenging to engage consumers as their attention spans are dwindling at an accelerated rate.

**SubQuestion No : 75**

**Q.75** Select the most appropriate option to fill in blank number 5.

**Ans** ✓ 1. increasingly

✗ 2. increased

✗ 3. increasing

✗ 4. increase

Question ID : 264330167948

Option 1 ID : 264330658690

Option 2 ID : 264330658688

Option 3 ID : 264330658689

Option 4 ID : 264330658687

Status : Answered

Chosen Option : 2

**Comprehension:**

In the following passage, some words have been deleted. Read the passage carefully and select the most appropriate option to fill in each blank.

Many years ago, when the art of stunting plants was quite unheard of 1. \_\_\_\_\_ in remote areas of India, Buddhist monks in isolated monasteries in Tibet stunted trees like the oak, orange tree, peepal tree, etc, watching with 2. \_\_\_\_\_ the tree still flowering and 3. \_\_\_\_\_ fruit regardless of this 'deformity'. Since the trees looked so artistically 4. \_\_\_\_\_, the art was learnt by some Chinese monks who taught 'Bonsai' making, an art that became most sought 5. \_\_\_\_\_ in China.

**SubQuestion No : 76**

**Q.76** Select the most appropriate option to fill in blank number 1.

- Ans**
- 1. always
  - 2. excerpt
  - 3. except
  - 4. expect

Question ID : 264330168259

Option 1 ID : 264330659903

Option 2 ID : 264330659906

Option 3 ID : 264330659904

Option 4 ID : 264330659905

Status : Answered

Chosen Option : 3

**Comprehension:**

In the following passage, some words have been deleted. Read the passage carefully and select the most appropriate option to fill in each blank.

Many years ago, when the art of stunting plants was quite unheard of 1. \_\_\_\_\_ in remote areas of India, Buddhist monks in isolated monasteries in Tibet stunted trees like the oak, orange tree, peepal tree, etc, watching with 2. \_\_\_\_\_ the tree still flowering and 3. \_\_\_\_\_ fruit regardless of this 'deformity'. Since the trees looked so artistically 4. \_\_\_\_\_, the art was learnt by some Chinese monks who taught 'Bonsai' making, an art that became most sought 5. \_\_\_\_\_ in China.

**SubQuestion No : 77**

**Q.77** Select the most appropriate option to fill in blank number 2.

- Ans**
- 1. encouragement
  - 2. embarrassment
  - 3. entertainment
  - 4. excitement

Question ID : 264330168260

Option 1 ID : 264330659909

Option 2 ID : 264330659910

Option 3 ID : 264330659908

Option 4 ID : 264330659907

Status : Answered

Chosen Option : 4

**Comprehension:**

In the following passage, some words have been deleted. Read the passage carefully and select the most appropriate option to fill in each blank.

Many years ago, when the art of stunting plants was quite unheard of 1. \_\_\_\_\_ in remote areas of India, Buddhist monks in isolated monasteries in Tibet stunted trees like the oak, orange tree, peepal tree, etc, watching with 2. \_\_\_\_\_ the tree still flowering and 3. \_\_\_\_\_ fruit regardless of this 'deformity'. Since the trees looked so artistically 4. \_\_\_\_\_, the art was learnt by some Chinese monks who taught 'Bonsai' making, an art that became most sought 5. \_\_\_\_\_ in China.

**SubQuestion No : 78**

**Q.78** Select the most appropriate option to fill in blank number 3.

**Ans** ✓ 1. bearing

✗ 2. losing

✗ 3. ending

✗ 4. rising

Question ID : 264330168261

Option 1 ID : 264330659914

Option 2 ID : 264330659912

Option 3 ID : 264330659913

Option 4 ID : 264330659911

Status : Answered

Chosen Option : 4

**Comprehension:**

In the following passage, some words have been deleted. Read the passage carefully and select the most appropriate option to fill in each blank.

Many years ago, when the art of stunting plants was quite unheard of 1. \_\_\_\_\_ in remote areas of India, Buddhist monks in isolated monasteries in Tibet stunted trees like the oak, orange tree, peepal tree, etc, watching with 2. \_\_\_\_\_ the tree still flowering and 3. \_\_\_\_\_ fruit regardless of this 'deformity'. Since the trees looked so artistically 4. \_\_\_\_\_, the art was learnt by some Chinese monks who taught 'Bonsai' making, an art that became most sought 5. \_\_\_\_\_ in China.

**SubQuestion No : 79**

**Q.79** Select the most appropriate option to fill in blank number 4.

**Ans** ✗ 1. harmful

✗ 2. cheerful

✓ 3. beautiful

✗ 4. fruitful

Question ID : 264330168262

Option 1 ID : 264330659918

Option 2 ID : 264330659916

Option 3 ID : 264330659917

Option 4 ID : 264330659915

Status : Answered

Chosen Option : 3

**Comprehension:**

In the following passage, some words have been deleted. Read the passage carefully and select the most appropriate option to fill in each blank.

Many years ago, when the art of stunting plants was quite unheard of 1. \_\_\_\_\_ in remote areas of India, Buddhist monks in isolated monasteries in Tibet stunted trees like the oak, orange tree, peepal tree, etc, watching with 2. \_\_\_\_\_ the tree still flowering and 3. \_\_\_\_\_ fruit regardless of this 'deformity'. Since the trees looked so artistically 4. \_\_\_\_\_, the art was learnt by some Chinese monks who taught 'Bonsai' making, an art that became most sought 5. \_\_\_\_\_ in China.

**SubQuestion No : 80**

**Q.80** Select the most appropriate option to fill in blank number 5.

- Ans  1. with  
 2. about  
 3. after  
 4. for

Question ID : 264330168263

Option 1 ID : 264330659921

Option 2 ID : 264330659922

Option 3 ID : 264330659919

Option 4 ID : 264330659920

Status : Answered

Chosen Option : 3

**Comprehension:**

In the following passage, some words have been deleted. Read the passage carefully and select the most appropriate option to fill in each blank.

Trees are one of the gifts of the nature which are of great (1) \_\_\_\_\_ for all living beings and environment. They have (2) \_\_\_\_\_ benefits to living beings providing natural herbs, vegetables, fruits, wood, timber, etc. Trees are the (3) \_\_\_\_\_ of many birds and insects. They are also considered as the (4) \_\_\_\_\_ part of the atmosphere which help in reducing pollution. Conserving trees and spreading awareness to plant trees will save the atmosphere from depletion and (5) \_\_\_\_\_ survival of all forms on earth.

**SubQuestion No : 81**

**Q.81** Select the most appropriate option to fill in blank No. 1.

- Ans  1. revolution  
 2. importance  
 3. renovation  
 4. transformation

Question ID : 264330169784

Option 1 ID : 264330665823

Option 2 ID : 264330665824

Option 3 ID : 264330665826

Option 4 ID : 264330665825

Status : Answered

Chosen Option : 2

**Comprehension:**

In the following passage, some words have been deleted. Read the passage carefully and select the most appropriate option to fill in each blank.

Trees are one of the gifts of the nature which are of great (1)\_\_\_\_\_ for all living beings and environment. They have (2)\_\_\_\_\_ benefits to living beings providing natural herbs, vegetables, fruits, wood, timber, etc. Trees are the (3)\_\_\_\_\_ of many birds and insects. They are also considered as the (4)\_\_\_\_\_ part of the atmosphere which help in reducing pollution. Conserving trees and spreading awareness to plant trees will save the atmosphere from depletion and (5)\_\_\_\_\_ survival of all forms on earth.

**SubQuestion No : 82**

**Q.82** Select the most appropriate option to fill in blank No. 2.

- Ans  1. minor  
 2. acute  
 3. less  
 4. ample

Question ID : 264330169785

Option 1 ID : 264330665830

Option 2 ID : 264330665828

Option 3 ID : 264330665827

Option 4 ID : 264330665829

Status : Answered

Chosen Option : 4

**Comprehension:**

In the following passage, some words have been deleted. Read the passage carefully and select the most appropriate option to fill in each blank.

Trees are one of the gifts of the nature which are of great (1)\_\_\_\_\_ for all living beings and environment. They have (2)\_\_\_\_\_ benefits to living beings providing natural herbs, vegetables, fruits, wood, timber, etc. Trees are the (3)\_\_\_\_\_ of many birds and insects. They are also considered as the (4)\_\_\_\_\_ part of the atmosphere which help in reducing pollution. Conserving trees and spreading awareness to plant trees will save the atmosphere from depletion and (5)\_\_\_\_\_ survival of all forms on earth.

**SubQuestion No : 83**

**Q.83** Select the most appropriate option to fill in blank No. 3.

- Ans  1. terrain  
 2. abode  
 3. asylum  
 4. refuge

Question ID : 264330169786

Option 1 ID : 264330665834

Option 2 ID : 264330665832

Option 3 ID : 264330665833

Option 4 ID : 264330665831

Status : Answered

Chosen Option : 4

**Comprehension:**

In the following passage, some words have been deleted. Read the passage carefully and select the most appropriate option to fill in each blank.

Trees are one of the gifts of the nature which are of great (1)\_\_\_\_\_ for all living beings and environment. They have (2)\_\_\_\_\_ benefits to living beings providing natural herbs, vegetables, fruits, wood, timber, etc. Trees are the (3)\_\_\_\_\_ of many birds and insects. They are also considered as the (4)\_\_\_\_\_ part of the atmosphere which help in reducing pollution. Conserving trees and spreading awareness to plant trees will save the atmosphere from depletion and (5)\_\_\_\_\_ survival of all forms on earth.

**SubQuestion No : 84**

**Q.84** Select the most appropriate option to fill in blank No. 4.

- Ans**  1. superficial  
 2. integral  
 3. petty  
 4. trivial

Question ID : 264330169787

Option 1 ID : 264330665838

Option 2 ID : 264330665836

Option 3 ID : 264330665837

Option 4 ID : 264330665835

Status : Answered

Chosen Option : 1

**Comprehension:**

In the following passage, some words have been deleted. Read the passage carefully and select the most appropriate option to fill in each blank.

Trees are one of the gifts of the nature which are of great (1)\_\_\_\_\_ for all living beings and environment. They have (2)\_\_\_\_\_ benefits to living beings providing natural herbs, vegetables, fruits, wood, timber, etc. Trees are the (3)\_\_\_\_\_ of many birds and insects. They are also considered as the (4)\_\_\_\_\_ part of the atmosphere which help in reducing pollution. Conserving trees and spreading awareness to plant trees will save the atmosphere from depletion and (5)\_\_\_\_\_ survival of all forms on earth.

**SubQuestion No : 85**

**Q.85** Select the most appropriate option to fill in blank No. 5.

- Ans**  1. ensure  
 2. pretend  
 3. rebuke  
 4. refuse

Question ID : 264330169788

Option 1 ID : 264330665840

Option 2 ID : 264330665842

Option 3 ID : 264330665841

Option 4 ID : 264330665839

Status : Answered

Chosen Option : 1

**Comprehension:**

Read the given passage and answer the questions that follow.

An important skill we all need to learn, in my opinion, is not to have preconceived notions about anything. Having said that I also know how difficult a thing it can be!

To drop the burden of preconceived notions, we need to unlearn a few things, which again is a tough thing to do. Very early on, we start cramming our brains with ideas and opinions.

These notions might have entered our mind from our family, parents, society or some of the books we might have read. We need to understand the fact that everything in life keeps changing and we just cannot stick to something only because that thought might have entered our brains years back!

I always thought ice-creams or chilled items were bad for a child having a cold or a running nose. I was terribly surprised when a GP in London told my four-year-old grandson with a cold to go ahead and have a popsicle. Later I found out that there is no scientific evidence to prove that an ice-cream or a popsicle can aggravate a cold!

**SubQuestion No : 86**

**Q.86 Select the statement that is correct according to the passage.**

- Ans**  1. Scientific research has proven that ice-creams worsen cold symptoms.
2. Unlearning preconceived notions is a tough thing to do.
3. Unlearning preconceived notions is an effortless process.
4. The author's grandson was advised to consume ice-creams to treat his cold.

Question ID : 264330170219

Option 1 ID : 264330667547

Option 2 ID : 264330667549

Option 3 ID : 264330667550

Option 4 ID : 264330667548

Status : Not Answered

Chosen Option : --

**Comprehension:**

Read the given passage and answer the questions that follow.

An important skill we all need to learn, in my opinion, is not to have preconceived notions about anything. Having said that I also know how difficult a thing it can be!

To drop the burden of preconceived notions, we need to unlearn a few things, which again is a tough thing to do. Very early on, we start cramming our brains with ideas and opinions.

These notions might have entered our mind from our family, parents, society or some of the books we might have read. We need to understand the fact that everything in life keeps changing and we just cannot stick to something only because that thought might have entered our brains years back!

I always thought ice-creams or chilled items were bad for a child having a cold or a running nose. I was terribly surprised when a GP in London told my four-year-old grandson with a cold to go ahead and have a popsicle. Later I found out that there is no scientific evidence to prove that an ice-cream or a popsicle can aggravate a cold!

**SubQuestion No : 87**

**Q.87 Select the most appropriate ANTONYM of the given word used in the passage.**

**Aggravate**

- Ans**  1. Destroy
2. Pester
3. Alleviate
4. Annihilate

Question ID : 264330170218

Option 1 ID : 264330667543

Option 2 ID : 264330667545

Option 3 ID : 264330667546

Option 4 ID : 264330667544

Status : Answered

Chosen Option : 1

**Comprehension:**

Read the given passage and answer the questions that follow.

An important skill we all need to learn, in my opinion, is not to have preconceived notions about anything. Having said that I also know how difficult a thing it can be!

To drop the burden of preconceived notions, we need to unlearn a few things, which again is a tough thing to do. Very early on, we start cramming our brains with ideas and opinions. These notions might have entered our mind from our family, parents, society or some of the books we might have read. We need to understand the fact that everything in life keeps changing and we just cannot stick to something only because that thought might have entered our brains years back!

I always thought ice-creams or chilled items were bad for a child having a cold or a running nose. I was terribly surprised when a GP in London told my four-year-old grandson with a cold to go ahead and have a popsicle. Later I found out that there is no scientific evidence to prove that an ice-cream or a popsicle can aggravate a cold!

**SubQuestion No : 88**

**Q.88 Select the most appropriate theme of the passage.**

- Ans**  1. The influence of personal experiences on our beliefs  
 2. The significance of seeking professional advice  
 3. The need for evidence-based decision making  
 4. The role of scientific evidence in debunking misconceptions

Question ID : 264330170220

Option 1 ID : 264330667552

Option 2 ID : 264330667553

Option 3 ID : 264330667554

Option 4 ID : 264330667551

Status : **Not Answered**

Chosen Option : --

**Comprehension:**

Read the given passage and answer the questions that follow.

An important skill we all need to learn, in my opinion, is not to have preconceived notions about anything. Having said that I also know how difficult a thing it can be!

To drop the burden of preconceived notions, we need to unlearn a few things, which again is a tough thing to do. Very early on, we start cramming our brains with ideas and opinions. These notions might have entered our mind from our family, parents, society or some of the books we might have read. We need to understand the fact that everything in life keeps changing and we just cannot stick to something only because that thought might have entered our brains years back!

I always thought ice-creams or chilled items were bad for a child having a cold or a running nose. I was terribly surprised when a GP in London told my four-year-old grandson with a cold to go ahead and have a popsicle. Later I found out that there is no scientific evidence to prove that an ice-cream or a popsicle can aggravate a cold!

**SubQuestion No : 89**

**Q.89 What is the tone of the passage?**

- Ans**  1. Sarcastic  
 2. Humorous  
 3. Reflective  
 4. Humanistic

Question ID : 264330170217

Option 1 ID : 264330667541

Option 2 ID : 264330667542

Option 3 ID : 264330667540

Option 4 ID : 264330667539

Status : **Answered**

Chosen Option : 2

**Comprehension:**

Read the given passage and answer the questions that follow.

An important skill we all need to learn, in my opinion, is not to have preconceived notions about anything. Having said that I also know how difficult a thing it can be!

To drop the burden of preconceived notions, we need to unlearn a few things, which again is a tough thing to do. Very early on, we start cramming our brains with ideas and opinions.

These notions might have entered our mind from our family, parents, society or some of the books we might have read. We need to understand the fact that everything in life keeps changing and we just cannot stick to something only because that thought might have entered our brains years back!

I always thought ice-creams or chilled items were bad for a child having a cold or a running nose. I was terribly surprised when a GP in London told my four-year-old grandson with a cold to go ahead and have a popsicle. Later I found out that there is no scientific evidence to prove that an ice-cream or a popsicle can aggravate a cold!

**SubQuestion No : 90**

**Q.90** Select the most appropriate title for the given passage.

- Ans**
- 1. The Power of Our Mind
  - 2. Challenging the Thought Process
  - 3. Unlearning Preconceived Notions
  - 4. Evaluating Our Superstitions

Question ID : 264330170216

Option 1 ID : 264330667537

Option 2 ID : 264330667538

Option 3 ID : 264330667535

Option 4 ID : 264330667536

Status : Answered

Chosen Option : 3

**Comprehension:**

Read the given passage and answer the questions that follow.

The term 'personalised learning' has been in vogue for a long time. Earlier, it referred to a one-to-one tutoring system, mostly for the privileged. Today, it refers to learning that prioritises an individual student's requirements and uses flexible instructional practices in terms of content, pace and materials. Learning need not be linear as, sometimes, learners may have to take a step back if not equipped with the necessary schemata to understand the content.

The entire learning process becomes student-centric and the students are encouraged to design their own learning pathways.

Artificial Intelligence (AI) and Data Analytics play a major role in online and hybrid learning platforms. Globally, HEIs are introducing programmes where AI provides the platform to launch personalised learning. Technology provides a variety of materials in various formats to suit different students and monitor and assess their progress. However, it does not undermine the teacher's role. There are areas such as communication and collaborative skills, and emotional intelligence, which require human intervention. Therefore, the role of teachers in personalised learning remains as important as it is in traditional learning. AI can never replace educators; it can only enhance and support personalised learning by providing automated tasks, assessment platforms and feedback.

Many paths of study emerge and all ultimately merge with the curriculum's common learning outcome. Thus, the pattern of education becomes student-centric. This systemic change gives a new dimension to the teaching-learning process where teaching becomes counseling, and the teacher becomes a mentor. The students are motivated to take control of their learning and become autonomous.

**SubQuestion No : 91**

**Q.91** The passage supports which of the following statements?

- Ans**
- 1. Artificial Intelligence and Data Analytics enhance assessment platforms.
  - 2. The pattern of education has become teacher-centric today.
  - 3. Flexible instructional practices prioritise the learning objectives of the curriculum.
  - 4. The role of teachers in personalised learning remains the same as in traditional learning.

Question ID : 264330169185

Option 1 ID : 264330663534

Option 2 ID : 264330663532

Option 3 ID : 264330663531

Option 4 ID : 264330663533

Status : Not Answered

Chosen Option : --

**Comprehension:**

Read the given passage and answer the questions that follow.

The term 'personalised learning' has been in vogue for a long time. Earlier, it referred to a one-to-one tutoring system, mostly for the privileged. Today, it refers to learning that prioritises an individual student's requirements and uses flexible instructional practices in terms of content, pace and materials. Learning need not be linear as, sometimes, learners may have to take a step back if not equipped with the necessary schemata to understand the content. The entire learning process becomes student-centric and the students are encouraged to design their own learning pathways.

Artificial Intelligence (AI) and Data Analytics play a major role in online and hybrid learning platforms. Globally, HEIs are introducing programmes where AI provides the platform to launch personalised learning. Technology provides a variety of materials in various formats to suit different students and monitor and assess their progress. However, it does not undermine the teacher's role. There are areas such as communication and collaborative skills, and emotional intelligence, which require human intervention. Therefore, the role of teachers in personalised learning remains as important as it is in traditional learning. AI can never replace educators; it can only enhance and support personalised learning by providing automated tasks, assessment platforms and feedback.

Many paths of study emerge and all ultimately merge with the curriculum's common learning outcome. Thus, the pattern of education becomes student-centric. This systemic change gives a new dimension to the teaching-learning process where teaching becomes counseling, and the teacher becomes a mentor. The students are motivated to take control of their learning and become autonomous.

**SubQuestion No : 92**

**Q.92** What is the tone of the given passage?

- Ans**
- 1. Sorrowful and sympathetic
  - 2. Humorous and amusing
  - 3. Supportive and encouraging
  - 4. Outraged and angry

Question ID : 264330169188

Option 1 ID : 264330663543

Option 2 ID : 264330663546

Option 3 ID : 264330663544

Option 4 ID : 264330663545

Status : Answered

Chosen Option : 3

**Comprehension:**

Read the given passage and answer the questions that follow.

The term 'personalised learning' has been in vogue for a long time. Earlier, it referred to a one-to-one tutoring system, mostly for the privileged. Today, it refers to learning that prioritises an individual student's requirements and uses flexible instructional practices in terms of content, pace and materials. Learning need not be linear as, sometimes, learners may have to take a step back if not equipped with the necessary schemata to understand the content. The entire learning process becomes student-centric and the students are encouraged to design their own learning pathways.

Artificial Intelligence (AI) and Data Analytics play a major role in online and hybrid learning platforms. Globally, HEIs are introducing programmes where AI provides the platform to launch personalised learning. Technology provides a variety of materials in various formats to suit different students and monitor and assess their progress. However, it does not undermine the teacher's role. There are areas such as communication and collaborative skills, and emotional intelligence, which require human intervention. Therefore, the role of teachers in personalised learning remains as important as it is in traditional learning. AI can never replace educators; it can only enhance and support personalised learning by providing automated tasks, assessment platforms and feedback.

Many paths of study emerge and all ultimately merge with the curriculum's common learning outcome. Thus, the pattern of education becomes student-centric. This systemic change gives a new dimension to the teaching-learning process where teaching becomes counseling, and the teacher becomes a mentor. The students are motivated to take control of their learning and become autonomous.

**SubQuestion No : 93**

**Q.93** The most appropriate synonym of the word 'linear' is:

- Ans  1. ambiguous  
 2. continuous  
 3. rapid  
 4. variable

Question ID : 264330169187

Option 1 ID : 264330663540

Option 2 ID : 264330663542

Option 3 ID : 264330663539

Option 4 ID : 264330663541

Status : Answered

Chosen Option : 2

**Comprehension:**

Read the given passage and answer the questions that follow.

The term 'personalised learning' has been in vogue for a long time. Earlier, it referred to a one-to-one tutoring system, mostly for the privileged. Today, it refers to learning that prioritises an individual student's requirements and uses flexible instructional practices in terms of content, pace and materials. Learning need not be linear as, sometimes, learners may have to take a step back if not equipped with the necessary schemata to understand the content. The entire learning process becomes student-centric and the students are encouraged to design their own learning pathways.

Artificial Intelligence (AI) and Data Analytics play a major role in online and hybrid learning platforms. Globally, HEIs are introducing programmes where AI provides the platform to launch personalised learning. Technology provides a variety of materials in various formats to suit different students and monitor and assess their progress. However, it does not undermine the teacher's role. There are areas such as communication and collaborative skills, and emotional intelligence, which require human intervention. Therefore, the role of teachers in personalised learning remains as important as it is in traditional learning. AI can never replace educators; it can only enhance and support personalised learning by providing automated tasks, assessment platforms and feedback.

Many paths of study emerge and all ultimately merge with the curriculum's common learning outcome. Thus, the pattern of education becomes student-centric. This systemic change gives a new dimension to the teaching-learning process where teaching becomes counseling, and the teacher becomes a mentor. The students are motivated to take control of their learning and become autonomous.

**SubQuestion No : 94**

**Q.94** What is the best summary of the given passage?

- Ans**
- 1. Student-centric learning engages students as a facilitator in their own learning.
  - 2. The role of teachers in personalised learning does not remain as important as it is in traditional learning.
  - 3. Artificial Intelligence includes mimicking human cognitive activity and giving freedom to the students to study in a way that suits them partially.
  - 4. Personalised learning is tailored to the individual needs of each student.

Question ID : 264330169186

Option 1 ID : 264330663537

Option 2 ID : 264330663538

Option 3 ID : 264330663536

Option 4 ID : 264330663535

Status : Not Answered

Chosen Option : --

**Comprehension:**

Read the given passage and answer the questions that follow.

The term 'personalised learning' has been in vogue for a long time. Earlier, it referred to a one-to-one tutoring system, mostly for the privileged. Today, it refers to learning that prioritises an individual student's requirements and uses flexible instructional practices in terms of content, pace and materials. Learning need not be linear as, sometimes, learners may have to take a step back if not equipped with the necessary schemata to understand the content. The entire learning process becomes student-centric and the students are encouraged to design their own learning pathways.

Artificial Intelligence (AI) and Data Analytics play a major role in online and hybrid learning platforms. Globally, HEIs are introducing programmes where AI provides the platform to launch personalised learning. Technology provides a variety of materials in various formats to suit different students and monitor and assess their progress. However, it does not undermine the teacher's role. There are areas such as communication and collaborative skills, and emotional intelligence, which require human intervention. Therefore, the role of teachers in personalised learning remains as important as it is in traditional learning. AI can never replace educators; it can only enhance and support personalised learning by providing automated tasks, assessment platforms and feedback.

Many paths of study emerge and all ultimately merge with the curriculum's common learning outcome. Thus, the pattern of education becomes student-centric. This systemic change gives a new dimension to the teaching-learning process where teaching becomes counseling, and the teacher becomes a mentor. The students are motivated to take control of their learning and become autonomous.

**SubQuestion No : 95**

**Q.95** Select an appropriate title for the given passage.

- Ans**
- 1. The Latest Trends of Content
  - 2. Personalised Learning Aims at Teachers' Strength
  - 3. Technology Formats to Assess Students' Intellect
  - 4. Student-Centric Pedagogy Fosters Learner Autonomy

Question ID : 264330169184

Option 1 ID : 264330663527

Option 2 ID : 264330663529

Option 3 ID : 264330663530

Option 4 ID : 264330663528

Status : Answered

Chosen Option : 3

**Comprehension:**

Read the given passage and answer the questions that follow.

Emma had always been a driven and ambitious student. She had a passion for science and medicine, and her dream was to become a doctor. She worked tirelessly throughout her college years, studying long hours and sacrificing her social life in pursuit of her goals. Despite the challenges, Emma was determined to succeed and make a difference in the world.

One fateful evening, while driving home from a late-night study session, Emma's life changed forever. A car came out of nowhere and collided with her vehicle, sending it spinning out of control. When the dust settled, Emma found herself trapped inside the wreckage, unable to move or even scream for help. The accident had left her with a broken leg and several other injuries. Emma was in shock and couldn't believe what had happened to her. She was devastated to think that all her hard work and dedication had been for nothing. She would now have to put her dreams on hold and spend months recovering from her injuries.

As Emma lay in the hospital, she was consumed with anger and frustration. She couldn't understand why this had happened to her, why her life had been turned upside down in an instant. She felt alone and helpless, unable to find any sense of purpose or meaning in her suffering. But as the days turned into weeks, Emma began to notice something different about the people around her. She met a nurse named Mary, who had been working at the hospital for over twenty years. Mary had a kind and caring personality, which Emma found comforting during her stay. She also met a patient named John, who had been in a car accident similar to Emma's. John had suffered a spinal cord injury and was paralysed from the waist down.

Despite his condition, John was always positive and never gave up hope.

Emma soon realised that the accident had brought her into contact with these amazing people and had given her the opportunity to learn from them. She learned from Mary how to be kind and caring towards others, even in difficult situations. She learned from John how to be positive and never give up, even when things seem impossible. After several months of recovery, Emma was able to walk again, but she still faced many challenges. She had to work extra hard to catch up with her studies and she had to adjust to life with a permanent scar on her leg. However, she realised that the accident had taught her valuable lessons that would help her become a better doctor. She had learned to empathise with her patients and to be grateful for her own health.

Years later, Emma became a successful doctor and was known for her compassion and empathy towards her patients. She often thought back to the accident and realised that it had been a turning point in her life. It had forced her to slow down and appreciate the small things in life. She was grateful for the people she had met during her recovery and realised that without the accident, she may never have met them. This story reflects that whatever happens, it happens for good. Even though the accident had seemed like a setback for Emma, it had brought her into contact with amazing people and taught her valuable lessons that she would carry with her for the rest of her life. Sometimes, the things we think are obstacles are actually opportunities in disguise. It is up to us to find the silver lining and make the best of every situation.

**SubQuestion No : 96**

**Q.96 What is the central theme of the story?**

- Ans**
- 1. The importance of staying positive in difficult situations
  - 2. The value of hard work and dedication in achieving one's dreams
  - 3. The idea that obstacles can present unexpected opportunities
  - 4. The challenges of recovering from a serious injury

Question ID : 264330168879

Option 1 ID : 264330662323

Option 2 ID : 264330662325

Option 3 ID : 264330662326

Option 4 ID : 264330662324

Status : Answered

Chosen Option : 1

**Comprehension:**

Read the given passage and answer the questions that follow.

Emma had always been a driven and ambitious student. She had a passion for science and medicine, and her dream was to become a doctor. She worked tirelessly throughout her college years, studying long hours and sacrificing her social life in pursuit of her goals. Despite the challenges, Emma was determined to succeed and make a difference in the world.

One fateful evening, while driving home from a late-night study session, Emma's life changed forever. A car came out of nowhere and collided with her vehicle, sending it spinning out of control. When the dust settled, Emma found herself trapped inside the wreckage, unable to move or even scream for help. The accident had left her with a broken leg and several other injuries. Emma was in shock and couldn't believe what had happened to her. She was devastated to think that all her hard work and dedication had been for nothing. She would now have to put her dreams on hold and spend months recovering from her injuries.

As Emma lay in the hospital, she was consumed with anger and frustration. She couldn't understand why this had happened to her, why her life had been turned upside down in an instant. She felt alone and helpless, unable to find any sense of purpose or meaning in her suffering. But as the days turned into weeks, Emma began to notice something different about the people around her. She met a nurse named Mary, who had been working at the hospital for over twenty years. Mary had a kind and caring personality, which Emma found comforting during her stay. She also met a patient named John, who had been in a car accident similar to Emma's. John had suffered a spinal cord injury and was paralysed from the waist down.

Despite his condition, John was always positive and never gave up hope.

Emma soon realised that the accident had brought her into contact with these amazing people and had given her the opportunity to learn from them. She learned from Mary how to be kind and caring towards others, even in difficult situations. She learned from John how to be positive and never give up, even when things seem impossible. After several months of recovery, Emma was able to walk again, but she still faced many challenges. She had to work extra hard to catch up with her studies and she had to adjust to life with a permanent scar on her leg. However, she realised that the accident had taught her valuable lessons that would help her become a better doctor. She had learned to empathise with her patients and to be grateful for her own health.

Years later, Emma became a successful doctor and was known for her compassion and empathy towards her patients. She often thought back to the accident and realised that it had been a turning point in her life. It had forced her to slow down and appreciate the small things in life. She was grateful for the people she had met during her recovery and realised that without the accident, she may never have met them. This story reflects that whatever happens, it happens for good. Even though the accident had seemed like a setback for Emma, it had brought her into contact with amazing people and taught her valuable lessons that she would carry with her for the rest of her life. Sometimes, the things we think are obstacles are actually opportunities in disguise. It is up to us to find the silver lining and make the best of every situation.

**SubQuestion No : 97**

**Q.97 Find the ANTONYM of the word 'aggravate' from the passage.**

- Ans**
- 1. Tease
  - 2. Oblige
  - 3. Dedicate
  - 4. Irritate

Question ID : 264330168881

Option 1 ID : 264330662333

Option 2 ID : 264330662332

Option 3 ID : 264330662334

Option 4 ID : 264330662331

Status : Answered

Chosen Option : 2

**Comprehension:**

Read the given passage and answer the questions that follow.

Emma had always been a driven and ambitious student. She had a passion for science and medicine, and her dream was to become a doctor. She worked tirelessly throughout her college years, studying long hours and sacrificing her social life in pursuit of her goals. Despite the challenges, Emma was determined to succeed and make a difference in the world.

One fateful evening, while driving home from a late-night study session, Emma's life changed forever. A car came out of nowhere and collided with her vehicle, sending it spinning out of control. When the dust settled, Emma found herself trapped inside the wreckage, unable to move or even scream for help. The accident had left her with a broken leg and several other injuries. Emma was in shock and couldn't believe what had happened to her. She was devastated to think that all her hard work and dedication had been for nothing. She would now have to put her dreams on hold and spend months recovering from her injuries.

As Emma lay in the hospital, she was consumed with anger and frustration. She couldn't understand why this had happened to her, why her life had been turned upside down in an instant. She felt alone and helpless, unable to find any sense of purpose or meaning in her suffering. But as the days turned into weeks, Emma began to notice something different about the people around her. She met a nurse named Mary, who had been working at the hospital for over twenty years. Mary had a kind and caring personality, which Emma found comforting during her stay. She also met a patient named John, who had been in a car accident similar to Emma's. John had suffered a spinal cord injury and was paralysed from the waist down.

Despite his condition, John was always positive and never gave up hope.

Emma soon realised that the accident had brought her into contact with these amazing people and had given her the opportunity to learn from them. She learned from Mary how to be kind and caring towards others, even in difficult situations. She learned from John how to be positive and never give up, even when things seem impossible. After several months of recovery, Emma was able to walk again, but she still faced many challenges. She had to work extra hard to catch up with her studies and she had to adjust to life with a permanent scar on her leg. However, she realised that the accident had taught her valuable lessons that would help her become a better doctor. She had learned to empathise with her patients and to be grateful for her own health.

Years later, Emma became a successful doctor and was known for her compassion and empathy towards her patients. She often thought back to the accident and realised that it had been a turning point in her life. It had forced her to slow down and appreciate the small things in life. She was grateful for the people she had met during her recovery and realised that without the accident, she may never have met them. This story reflects that whatever happens, it happens for good. Even though the accident had seemed like a setback for Emma, it had brought her into contact with amazing people and taught her valuable lessons that she would carry with her for the rest of her life. Sometimes, the things we think are obstacles are actually opportunities in disguise. It is up to us to find the silver lining and make the best of every situation.

**SubQuestion No : 98**

**Q.98** What was Emma's dream before the accident?

- Ans**
- 1. To become a nurse
  - 2. To become a doctor
  - 3. To become a lawyer
  - 4. To become a teacher

Question ID : 264330168877

Option 1 ID : 264330662315

Option 2 ID : 264330662316

Option 3 ID : 264330662318

Option 4 ID : 264330662317

Status : Answered

Chosen Option : 2

**Comprehension:**

Read the given passage and answer the questions that follow.

Emma had always been a driven and ambitious student. She had a passion for science and medicine, and her dream was to become a doctor. She worked tirelessly throughout her college years, studying long hours and sacrificing her social life in pursuit of her goals. Despite the challenges, Emma was determined to succeed and make a difference in the world.

One fateful evening, while driving home from a late-night study session, Emma's life changed forever. A car came out of nowhere and collided with her vehicle, sending it spinning out of control. When the dust settled, Emma found herself trapped inside the wreckage, unable to move or even scream for help. The accident had left her with a broken leg and several other injuries. Emma was in shock and couldn't believe what had happened to her. She was devastated to think that all her hard work and dedication had been for nothing. She would now have to put her dreams on hold and spend months recovering from her injuries.

As Emma lay in the hospital, she was consumed with anger and frustration. She couldn't understand why this had happened to her, why her life had been turned upside down in an instant. She felt alone and helpless, unable to find any sense of purpose or meaning in her suffering. But as the days turned into weeks, Emma began to notice something different about the people around her. She met a nurse named Mary, who had been working at the hospital for over twenty years. Mary had a kind and caring personality, which Emma found comforting during her stay. She also met a patient named John, who had been in a car accident similar to Emma's. John had suffered a spinal cord injury and was paralysed from the waist down.

Despite his condition, John was always positive and never gave up hope.

Emma soon realised that the accident had brought her into contact with these amazing people and had given her the opportunity to learn from them. She learned from Mary how to be kind and caring towards others, even in difficult situations. She learned from John how to be positive and never give up, even when things seem impossible. After several months of recovery, Emma was able to walk again, but she still faced many challenges. She had to work extra hard to catch up with her studies and she had to adjust to life with a permanent scar on her leg. However, she realised that the accident had taught her valuable lessons that would help her become a better doctor. She had learned to empathise with her patients and to be grateful for her own health.

Years later, Emma became a successful doctor and was known for her compassion and empathy towards her patients. She often thought back to the accident and realised that it had been a turning point in her life. It had forced her to slow down and appreciate the small things in life. She was grateful for the people she had met during her recovery and realised that without the accident, she may never have met them. This story reflects that whatever happens, it happens for good. Even though the accident had seemed like a setback for Emma, it had brought her into contact with amazing people and taught her valuable lessons that she would carry with her for the rest of her life. Sometimes, the things we think are obstacles are actually opportunities in disguise. It is up to us to find the silver lining and make the best of every situation.

**SubQuestion No : 99**

**Q.99 What challenges did Emma face after her recovery?**

- Ans**
- 1. She had to adjust to life with a permanent scar on her back.
  - 2. She had to adjust to life with a permanent scar on her arm.
  - 3. She had to adjust to life with a permanent scar on her leg.
  - 4. She had to adjust to life with a permanent scar on her face.

Question ID : 264330168878

Option 1 ID : 264330662322

Option 2 ID : 264330662320

Option 3 ID : 264330662319

Option 4 ID : 264330662321

Status : Answered

Chosen Option : 3

**Comprehension:**

Read the given passage and answer the questions that follow.

Emma had always been a driven and ambitious student. She had a passion for science and medicine, and her dream was to become a doctor. She worked tirelessly throughout her college years, studying long hours and sacrificing her social life in pursuit of her goals. Despite the challenges, Emma was determined to succeed and make a difference in the world.

One fateful evening, while driving home from a late-night study session, Emma's life changed forever. A car came out of nowhere and collided with her vehicle, sending it spinning out of control. When the dust settled, Emma found herself trapped inside the wreckage, unable to move or even scream for help. The accident had left her with a broken leg and several other injuries. Emma was in shock and couldn't believe what had happened to her. She was devastated to think that all her hard work and dedication had been for nothing. She would now have to put her dreams on hold and spend months recovering from her injuries.

As Emma lay in the hospital, she was consumed with anger and frustration. She couldn't understand why this had happened to her, why her life had been turned upside down in an instant. She felt alone and helpless, unable to find any sense of purpose or meaning in her suffering. But as the days turned into weeks, Emma began to notice something different about the people around her. She met a nurse named Mary, who had been working at the hospital for over twenty years. Mary had a kind and caring personality, which Emma found comforting during her stay. She also met a patient named John, who had been in a car accident similar to Emma's. John had suffered a spinal cord injury and was paralysed from the waist down.

Despite his condition, John was always positive and never gave up hope.

Emma soon realised that the accident had brought her into contact with these amazing people and had given her the opportunity to learn from them. She learned from Mary how to be kind and caring towards others, even in difficult situations. She learned from John how to be positive and never give up, even when things seem impossible. After several months of recovery, Emma was able to walk again, but she still faced many challenges. She had to work extra hard to catch up with her studies and she had to adjust to life with a permanent scar on her leg. However, she realised that the accident had taught her valuable lessons that would help her become a better doctor. She had learned to empathise with her patients and to be grateful for her own health.

Years later, Emma became a successful doctor and was known for her compassion and empathy towards her patients. She often thought back to the accident and realised that it had been a turning point in her life. It had forced her to slow down and appreciate the small things in life. She was grateful for the people she had met during her recovery and realised that without the accident, she may never have met them. This story reflects that whatever happens, it happens for good. Even though the accident had seemed like a setback for Emma, it had brought her into contact with amazing people and taught her valuable lessons that she would carry with her for the rest of her life. Sometimes, the things we think are obstacles are actually opportunities in disguise. It is up to us to find the silver lining and make the best of every situation.

**SubQuestion No : 100**

**Q.100 What is the significance of the patient John in the story?**

- Ans**
- 1. He helps Emma recover from her injuries and shows her how to be positive and never give up
  - 2. He is a doctor who specialises in spinal cord injuries and helps Emma learn about the medical field
  - 3. He is a fellow colleague of Emma's who is also recovering from an injury
  - 4. He teaches Emma how to be kind and caring towards others, even in difficult situations

Question ID : 264330168880

Option 1 ID : 264330662328

Option 2 ID : 264330662330

Option 3 ID : 264330662329

Option 4 ID : 264330662327

Status : Answered

Chosen Option : 1