

SSC Steno

Official Paper

Previous Year Paper

12 Oct, 2023 Shift 1



Adda247

Test Prime

ALL EXAMS, ONE SUBSCRIPTION



1,00,000+
Mock Tests



Personalised
Report Card



Unlimited
Re-Attempt



600+
Exam Covered



25,000+ Previous
Year Papers



500%
Refund



ATTEMPT FREE MOCK NOW

Exam Date	12/10/2023
Exam Time	9:00 AM - 11:00 AM
Subject	Stenographer Grade C and D Examination 2023

Section : General Intelligence and Reasoning

Q.1 निम्नलिखित पदों में से कौन-सा पद दी गई श्रृंखला में प्रश्न चिह्न (?) को प्रतिस्थापित करेगा?
DCZ, FFY, ?, JLW, LOV

Ans ✓ 1. HIX

✗ 2. HJX

✗ 3. FHY

✗ 4. GJX

Question ID : 26433089480

Option 1 ID : 264330351421

Option 2 ID : 264330351424

Option 3 ID : 264330351423

Option 4 ID : 264330351422

Status : Answered

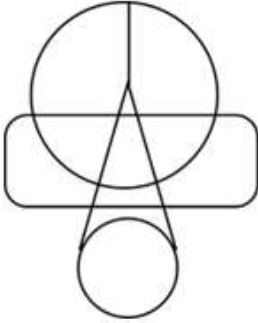
Chosen Option : 1

Q.2 उस विकल्प का चयन करें जिसमें दी गई आकृति अंतर्निहित है (घुमाने की अनुमति नहीं है)।

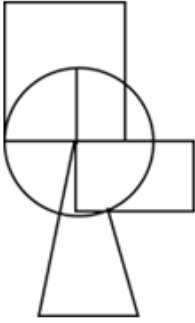


Ans

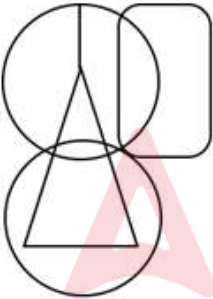
✗ 1.



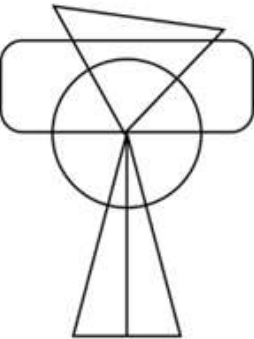
✗ 2.



✓ 3.



✗ 4.



Question ID : 264330132511

Option 1 ID : 264330519139

Option 2 ID : 264330519140

Option 3 ID : 264330519142

Option 4 ID : 264330519141

Status : Answered

Chosen Option : 3

Q.3 यदि $D = B > C = F$ और $F < B = E < A$ है, तो निम्नलिखित में से कौन-सा विकल्प सही नहीं है?

- Ans
- 1. $F < E$
 - 2. $A > C$
 - 3. $E = D$
 - 4. $A < F$

Question ID : 26433097270
 Option 1 ID : 264330381777
 Option 2 ID : 264330381779
 Option 3 ID : 264330381778
 Option 4 ID : 264330381780
 Status : Answered
 Chosen Option : 4

Q.4 दिए गए विकल्पों में से उस संख्या का चयन कीजिए जो निम्नलिखित श्रृंखला में प्रश्न चिह्न (?) के स्थान पर आ सकती है।
 13, 39, 65, 91, 117, ?

- Ans
- 1. 145
 - 2. 143
 - 3. 130
 - 4. 127

Question ID : 264330112658
 Option 1 ID : 264330442717
 Option 2 ID : 264330442718
 Option 3 ID : 264330442719
 Option 4 ID : 264330442720
 Status : Answered
 Chosen Option : 2

Q.5 निम्नलिखित में से कौन-सी संख्याओं को (अंकों को नहीं) आपस में प्रतिस्थापित करने पर दिया गया समीकरण संतुलित हो जाएगा?

$$14 \times 4 \div 10 + 10 - 20 = 2$$

- Ans
- 1. 2, 10
 - 2. 4, 20
 - 3. 10, 20
 - 4. 2, 14

Question ID : 264330144862
 Option 1 ID : 264330567705
 Option 2 ID : 264330567704
 Option 3 ID : 264330567706
 Option 4 ID : 264330567703
 Status : Answered
 Chosen Option : 1

Q.6 उस विकल्प का चयन कीजिए जो चौथी संख्या से उसी प्रकार संबंधित है जिस प्रकार पहली संख्या दूसरी संख्या से संबंधित है और पांचवीं संख्या छठी संख्या से संबंधित है?

54 : 3 :: ? : 4 :: 500 : 5

Ans 1. 192

2. 121

3. 100

4. 154

Question ID : 264330144875

Option 1 ID : 264330567755

Option 2 ID : 264330567757

Option 3 ID : 264330567758

Option 4 ID : 264330567756

Status : Answered

Chosen Option : 1

Q.7 निम्नलिखित चार अक्षर-समूहों में से तीन किसी निश्चित तरीके से आपस में संगत हैं जबकि कोई एक उनसे असंगत है। असंगत अक्षर-समूह का चयन कीजिए।

Ans 1. GLP

2. BEJ

3. QTY

4. KNS

Question ID : 26433058005

Option 1 ID : 264330227005

Option 2 ID : 264330227004

Option 3 ID : 264330227007

Option 4 ID : 264330227006

Status : Answered

Chosen Option : 1

Q.8 गणितीय चिह्नों के उचित संयोजन को चुनिए, जो 'A' को क्रमिक रूप से प्रतिस्थापित कर सके और दिए गए समीकरण को संतुलित कर सके।

28 A 14 A 12 A 6 A 4 A 3 A 4

Ans 1. +, -, +, ×, =, +

2. -, +, ×, =, +, +

3. -, +, +, ×, =, +

4. -, +, +, =, ×, +

Question ID : 264330129586

Option 1 ID : 264330507712

Option 2 ID : 264330507710

Option 3 ID : 264330507711

Option 4 ID : 264330507713

Status : Answered

Chosen Option : 4

Q.9 निम्नलिखित में से कौन-सी संख्या, दी गई श्रृंखला में प्रश्नचिह्न (?) को प्रतिस्थापित करेगी?
69, 70, 74, 83, ?, 124

- Ans
- 1. 112
 - 2. 120
 - 3. 93
 - 4. 99

Question ID : 264330102161
Option 1 ID : 264330401110
Option 2 ID : 264330401112
Option 3 ID : 264330401109
Option 4 ID : 264330401111
Status : Answered
Chosen Option : 4

Q.10 दो कथनों के बाद दो निष्कर्ष I और II दिए गए हैं। कथनों को सत्य मानते हुए, भले ही वे सामान्य रूप से ज्ञात तथ्यों से भिन्न प्रतीत होते हों, निर्णय लीजिए कि कौन सा/से निष्कर्ष कथनों का तार्किक रूप से अनुसरण करता/करते हैं/हैं।

कथन:

कुछ कंबल, रजाई हैं।

कुछ रजाई, चादर हैं।

निष्कर्ष:

I. सभी रजाई, कंबल हैं।

II. सभी कंबल, चादर हैं।

- Ans
- 1. निष्कर्ष I और II दोनों अनुसरण करते हैं
 - 2. न तो निष्कर्ष I अनुसरण करता है और न ही II अनुसरण करता है
 - 3. केवल निष्कर्ष II अनुसरण करता है
 - 4. केवल निष्कर्ष I अनुसरण करता है

Question ID : 264330144954
Option 1 ID : 264330568073
Option 2 ID : 264330568074
Option 3 ID : 264330568072
Option 4 ID : 264330568071
Status : Answered
Chosen Option : 2

Q.11 निम्नलिखित चार अक्षर-समूहों में से तीन किसी निश्चित तरीके से आपस में संगत हैं जबकि कोई एक उनसे असंगत है। असंगत अक्षर-समूह का चयन कीजिए।

- Ans
- 1. JRPV
 - 2. GTMN
 - 3. EVKP
 - 4. HSNM

Question ID : 26433068790
Option 1 ID : 264330269672
Option 2 ID : 264330269674
Option 3 ID : 264330269675
Option 4 ID : 264330269673
Status : Answered
Chosen Option : 1

Q.12 उस विकल्प का चयन कीजिए जो पाँचवीं संख्या से उसी प्रकार संबंधित हो, जैसे दूसरी संख्या पहली संख्या से संबंधित है और चौथी संख्या तीसरी संख्या से संबंधित है।
15 : 220 :: 10 : 95 :: 12 : ?

- Ans 1. 152
 2. 139
 3. 180
 4. 144

Question ID : 26433089558
 Option 1 ID : 264330351735
 Option 2 ID : 264330351734
 Option 3 ID : 264330351736
 Option 4 ID : 264330351733
 Status : Answered
 Chosen Option : 2

Q.13 सात लोग A, B, C, D, E, F और G उत्तर की ओर मुंह करके एक सीधी पंक्ति में बैठे हुए हैं। E के बाएं केवल 2 लोग बैठे हैं। G, E के ठीक बगल में बैठा है। B, F के दाएं ठीक बगल में बैठा है। G और F के बीच में केवल 3 लोग बैठे हैं। A, D के बाएं ठीक बगल में बैठा है।

पंक्ति के बाएं छोर पर कौन बैठा है?

- Ans 1. F
 2. A
 3. G
 4. C

Question ID : 264330144961
 Option 1 ID : 264330568101
 Option 2 ID : 264330568099
 Option 3 ID : 264330568102
 Option 4 ID : 264330568100
 Status : Answered
 Chosen Option : 4

Q.14 दिए गए कथनों और निष्कर्षों को ध्यानपूर्वक पढ़ें। यह मानते हुए कि कथनों में दी गई जानकारी सत्य है, भले ही वह सामान्य रूप से ज्ञात तथ्यों से भिन्न प्रतीत होती हो, और तय करें कि दिए गए निष्कर्षों में से कौन-सा/से निष्कर्ष कथनों का तार्किक रूप से अनुसरण करता है/करते हैं।

कथन:

- 1) सभी ब्रेड केक हैं।
- 2) कुछ केक पेस्ट्री हैं।
- 3) सभी पेस्ट्री टॉफी हैं।

निष्कर्ष:

- I. सभी केक टॉफी हैं।
- II. कोई भी ब्रेड पेस्ट्री नहीं है।

- Ans 1. न तो निष्कर्ष I अनुसरण करता है और न ही II अनुसरण करता है।
 2. निष्कर्ष I और II दोनों अनुसरण करते हैं।
 3. केवल निष्कर्ष II अनुसरण करता है।
 4. केवल निष्कर्ष I अनुसरण करता है।

Question ID : 26433092433
 Option 1 ID : 264330363023
 Option 2 ID : 264330363024
 Option 3 ID : 264330363022
 Option 4 ID : 264330363021
 Status : Answered
 Chosen Option : 1

Q.15 तीन कथनों के बाद I, II और III से संख्यांकित तीन निष्कर्ष दिए गए हैं। कथनों को सत्य मानते हुए, भले ही वे सामान्य रूप से ज्ञात तथ्यों से भिन्न प्रतीत होते हों, तय करें कि दिए गए निष्कर्षों में से कौन सा/से निष्कर्ष कथनों का तार्किक रूप से अनुसरण करता है/करते हैं।

कथन:

सभी होल्डर, हैंगर हैं।

सभी हैंगर, हथौड़े हैं।

कुछ हथौड़े, कुल्हाड़ी हैं।

निष्कर्ष:

I. कुछ कुल्हाड़ी, हैंगर हैं।

II. कुछ हथौड़े, होल्डर हैं।

III. कुछ हैंगर, होल्डर हैं।

Ans 1. केवल निष्कर्ष II और III अनुसरण करते ह

2. केवल निष्कर्ष I और III अनुसरण करते ह

3. केवल निष्कर्ष I और II अनुसरण करते ह

4. कोई भी निष्कर्ष अनुसरण नहीं करता है

Question ID : 26433097231

Option 1 ID : 264330381622

Option 2 ID : 264330381623

Option 3 ID : 264330381621

Option 4 ID : 264330381624

Status : Answered

Chosen Option : 1

Q.16 'F + R' का अर्थ है 'F, R की माँ है'

'F - R' का अर्थ है 'F, R का पिता है'

'F ÷ R' का अर्थ है 'F, R का पति है'

'F × R' का अर्थ है 'F, R की पुत्री है'

यदि 'A ÷ C × B + Q - Z' है, तो Q, A से किस प्रकार संबंधित है?

Ans 1. बहन

2. पिता

3. साला

4. दादा

Question ID : 264330102468

Option 1 ID : 264330402301

Option 2 ID : 264330402304

Option 3 ID : 264330402303

Option 4 ID : 264330402302

Status : Answered

Chosen Option : 3

Q.17 यदि 'A' का अर्थ '+' है, 'B' का अर्थ '×' है, 'C' का अर्थ '+' है और 'D' का अर्थ '-' है, तो निम्नलिखित समीकरण

में प्रश्न चिह्न (?) के स्थान पर क्या आएगा?

11 B 10 D 18 A 3 C 8 = ?

Ans 1. 142

2. 112

3. 132

4. 122

Question ID : 264330141900

Option 1 ID : 264330555922

Option 2 ID : 264330555919

Option 3 ID : 264330555921

Option 4 ID : 264330555920

Status : Answered

Chosen Option : 2

Q.18 दिए गए विकल्पों में से उस संख्या का चयन कीजिए जो निम्नलिखित श्रृंखला में प्रश्न चिह्न (?) के स्थान पर आ सकती है।

63, 78, 108, 153, ?

Ans 1. 207

2. 213

3. 185

4. 193

Question ID : 264330112668

Option 1 ID : 264330442759

Option 2 ID : 264330442760

Option 3 ID : 264330442757

Option 4 ID : 264330442758

Status : Answered

Chosen Option : 2

Q.19 उस समुच्चय का चयन कीजिए, जिसमें संख्याएँ उसी तरह से संबंधित हैं, जिस प्रकार दिए गए समुच्चय की संख्याएँ आपस में संबंधित हैं। (नोट: संख्याओं को उसके घटक अंकों में विभाजित किए बिना, पूर्ण संख्याओं पर ही गणितीय संक्रियाएँ की जानी चाहिए। जैसे 13 - मान लीजिए 13 पर गणितीय संक्रियाएँ जैसे कि 13 में जोड़ना/घटाना/गुणा करना आदि किया जा सकता है। 13 को 1 और 3 में तोड़कर और फिर 1 और 3 पर गणितीय संक्रियाएँ करने की अनुमति नहीं है।)

(4, 10, 23)

(8, 22, 47)

Ans 1. (5, 13, 23)

2. (6, 16, 29)

3. (10, 28, 53)

4. (7, 19, 41)

Question ID : 26433078964

Option 1 ID : 264330309871

Option 2 ID : 264330309868

Option 3 ID : 264330309870

Option 4 ID : 264330309869

Status : Answered

Chosen Option : 4

Q.20 निम्नलिखित समीकरण को सही करने के लिए किन दो चिह्नों को परस्पर बदला जाना चाहिए?

$$[(82 + 22) - (6 \times 2)] \div (2 - 4) \times 2 = 24$$

Ans 1. ÷ और +

2. - और +

3. + और ×

4. ÷ और ×

Question ID : 264330131559

Option 1 ID : 264330515340

Option 2 ID : 264330515341

Option 3 ID : 264330515339

Option 4 ID : 264330515342

Status : Answered

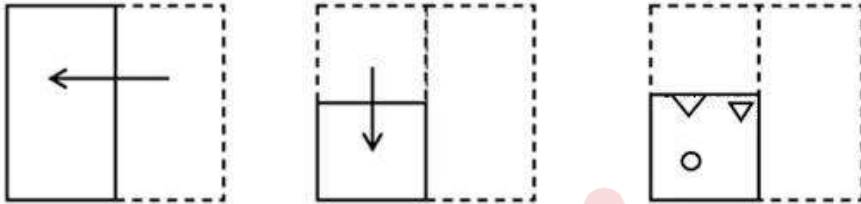
Chosen Option : 2

Q.21 दिए गए विकल्पों में से उस संख्या का चयन कीजिए जो निम्नलिखित श्रृंखला में प्रश्न चिह्न (?) के स्थान पर आ सकती है।
363, 344, 325, 306, ?

- Ans
- 1. 293
 - 2. 287
 - 3. 285
 - 4. 291

Question ID : 264330112670
 Option 1 ID : 264330442768
 Option 2 ID : 264330442766
 Option 3 ID : 264330442765
 Option 4 ID : 264330442767
 Status : Answered
 Chosen Option : 2

Q.22 एक कागज को नीचे दर्शाए गए अनुसार मोड़ा और काटा जाता है। खोलने के बाद यह कैसा दिखाई देगा?



Ans

- 1.
- 2.
- 3.
- 4.

Question ID : 264330106338
 Option 1 ID : 264330417655
 Option 2 ID : 264330417656
 Option 3 ID : 264330417653
 Option 4 ID : 264330417654
 Status : Answered
 Chosen Option : 4

Q.23 दो कथनों के बाद दो निष्कर्ष 1, और 2 दिए गए हैं। कथनों को सत्य मानते हुए, भले ही वे सामान्य रूप से ज्ञात तथ्यों से भिन्न प्रतीत होते हों, तय करें कि कौन-सा/से निष्कर्ष कथनों का तार्किक रूप से अनुसरण करता है/करते हैं।

कथन

1. कुछ स्तनधारी जन्तु हैं।
2. सभी जन्तु पक्षी हैं।

निष्कर्ष

1. सभी पक्षी जन्तु हैं।
2. कुछ स्तनधारी पक्षी हैं।

Ans 1. न तो निष्कर्ष 1 और न ही निष्कर्ष 2 अनुसरण करता है।

2. केवल निष्कर्ष 1 अनुसरण करता है।

3. निष्कर्ष 1 और निष्कर्ष 2 दोनों अनुसरण करते हैं।

4. केवल निष्कर्ष 2 अनुसरण करता है।

Question ID : 264330144914

Option 1 ID : 264330567914

Option 2 ID : 264330567913

Option 3 ID : 264330567912

Option 4 ID : 264330567911

Status : Answered

Chosen Option : 4

Q.24 सलमान अपने कार्यालय से चलना शुरू करता है और दक्षिण की ओर 29 km झाड़व करता है। फिर वह दाएं मुड़ता है और 16 km झाड़व करता है, फिर से वह दाएं मुड़ता है और 29 km झाड़व करता है। अंत में वह दाएं मुड़ता है और 13 km झाड़व करता है। वह एक सीधी रेखा में अपने शुरुआती बिंदु से कितनी दूरी पर है?

Ans 1. 3 km

2. 16 km

3. 29 km

4. 13 km

Question ID : 264330132111

Option 1 ID : 264330517540

Option 2 ID : 264330517542

Option 3 ID : 264330517541

Option 4 ID : 264330517539

Status : Answered

Chosen Option : 1

Q.25 एक निश्चित कूट भाषा में 'ACTION' को 'DFWFLK' लिखा जाता है और 'BISHOP' को 'ELVELM' लिखा जाता है। उसी भाषा में 'MATTER' को कैसे लिखा जाएगा?

Ans 1. QEWQBO

2. PDWQBO

3. QDWQCO

4. PEXQCO

Question ID : 26433080702

Option 1 ID : 264330316744

Option 2 ID : 264330316742

Option 3 ID : 264330316743

Option 4 ID : 264330316741

Status : Answered


Chosen Option : 3

Q.26 A, B, C, D, E, F और G की लंबाई भिन्न-भिन्न है। A केवल दो व्यक्तियों से लंबा है। D केवल G से छोटा है। F, A से लंबा है, लेकिन B से छोटा है। C, E से छोटा है। E से कितने लोग छोटे हैं?

- Ans
- 1. कोई नहीं
 - 2. तीन
 - 3. एक
 - 4. चार

Question ID : 264330131655
 Option 1 ID : 264330515719
 Option 2 ID : 264330515721
 Option 3 ID : 264330515720
 Option 4 ID : 264330515722
 Status : Answered
 Chosen Option : 3

Q.27 दिए गए विकल्पों में से उस आकृति का चयन करें, जो निम्नलिखित श्रृंखला में प्रश्नचिह्न (?) को प्रतिस्थापित करेगी।

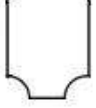


Ans

- 1.
- 2.
- 3.
- 4.

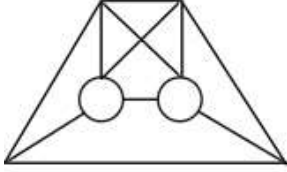
Question ID : 26433087163
 Option 1 ID : 264330342291
 Option 2 ID : 264330342290
 Option 3 ID : 264330342292
 Option 4 ID : 264330342289
 Status : Answered
 Chosen Option : 4

Q.28 उस विकल्प का चयन करें जिसमें दी गई आकृति अंतर्निहित है (घुमाने की अनुमति नहीं है)।

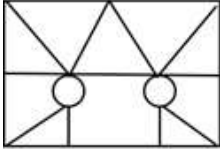


Ans

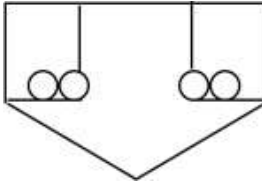
✓ 1.



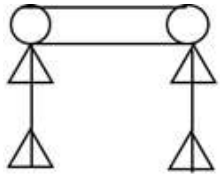
✗ 2.



✗ 3.



✗ 4.



Question ID : 264330111657

Option 1 ID : 264330438714

Option 2 ID : 264330438713

Option 3 ID : 264330438715

Option 4 ID : 264330438716

Status : Answered

Chosen Option : 1

Q.29 निम्नांकित शृंखला में पैटर्न को जारी रखने के लिए प्रश्नचिह्न (?) को किस आकृति द्वारा प्रतिस्थापित किया जाना चाहिए?

♡	3	Z	7	T	3	B	7	Z	0	T	7	
	B		♡		3			B				?
7	T	0	B	0	Z	0	T	♡	3	♡	Z	

Ans

✗ 1.

T	♡	Z
	7	
0	3	B

✗ 2.


7	Z	B
	0	
T	3	♡

✗ 3.

3	♡	0
	T	
Z	B	7

✓ 4.

3	0	Z
	7	
♡	T	B



Question ID : 264330129597
 Option 1 ID : 264330507757
 Option 2 ID : 264330507755
 Option 3 ID : 264330507756
 Option 4 ID : 264330507754
 Status : Answered
 Chosen Option : 4

Q.30 यदि '+' का अर्थ 'के द्वारा विभाजित' है। '-' का अर्थ 'में जोड़ा गया' है, 'x' का अर्थ 'से घटाया गया' है और '÷' का अर्थ 'के द्वारा गुणा किया गया' है, तो निम्न व्यंजक का मान क्या होगा?

$$(43 \times 23 - (4 \div 3)) + (12 - 4) \div 3$$

- Ans
- ✗ 1. 2
 - ✗ 2. 5
 - ✓ 3. 6
 - ✗ 4. 4

Question ID : 264330144869
 Option 1 ID : 264330567731
 Option 2 ID : 264330567733
 Option 3 ID : 264330567734
 Option 4 ID : 264330567732
 Status : Answered
 Chosen Option : 3

Q.31 निम्नलिखित में से उस समुच्चय का चयन कीजिए, जिसमें संख्याएँ उसी प्रकार से संबंधित हैं, जिस प्रकार दिए गए समुच्चय की संख्याएँ संबंधित हैं।
(नोट: संख्याओं को उसके घटक अंकों में विभाजित किए बिना, पूर्ण संख्याओं पर ही गणितीय संक्रियाएँ की जानी चाहिए। जैसे 13 - मान लीजिए 13 पर गणितीय संक्रियाएँ जैसे कि 13 में जोड़ना/घटाना/गुणा करना आदि किया जा सकता है। 13 को 1 और 3 में तोड़कर और फिर 1 और 3 पर गणितीय संक्रियाएँ करने की अनुमति नहीं है।)
(30, 625, 5)
(20, 225, 5)

- Ans
- 1. (19, 122, 7)
 - 2. (21, 297, 6)
 - 3. (32, 280, 5)
 - 4. (24, 256, 8)

Question ID : 26433083123
Option 1 ID : 264330326325
Option 2 ID : 264330326326
Option 3 ID : 264330326327
Option 4 ID : 264330326328
Status : Answered
Chosen Option : 4

Q.32 एक निश्चित कूट भाषा में 'EXIST' को 'FYHTU' लिखा जाता है और 'ABOVE' को 'BCNWF' लिखा जाता है। उसी भाषा में 'WORLD' को कैसे लिखा जाएगा?

- Ans
- 1. XPQME
 - 2. XPRNF
 - 3. YQQME
 - 4. YPQNE

Question ID : 26433080703
Option 1 ID : 264330316746
Option 2 ID : 264330316745
Option 3 ID : 264330316748
Option 4 ID : 264330316747
Status : Answered
Chosen Option : 1

Q.33 उस विकल्प का चयन करें, जो तीसरे शब्द से उसी प्रकार संबंधित है, जैसे दूसरा शब्द पहले शब्द से संबंधित है।
(शब्दों को अंग्रेजी/हिंदी के अर्थपूर्ण शब्दों के रूप में माना जाना चाहिए और ये शब्द, अक्षरों की संख्या/व्यंजनों/स्वरों की संख्या के आधार पर एक-दूसरे से संबंधित नहीं होने चाहिए)
बोरी : जूट :: टोकरी : ?

- Ans
- 1. कपास
 - 2. बाँस
 - 3. संगमरमर
 - 4. रेयान

Question ID : 26433070280
Option 1 ID : 264330275597
Option 2 ID : 264330275596
Option 3 ID : 264330275598
Option 4 ID : 264330275599
Status : Answered
Chosen Option : 2

Q.34 'A + B' का अर्थ है 'A, B का भाई है'
 'A - B' का अर्थ है 'A, B की माँ है'
 'A × B' का अर्थ है 'A, B का पति है'
 'A ÷ B' का अर्थ है 'A, B की बहन है'
 यदि 'C + M - S × K - T ÷ Q' है, तो निम्न में से कौन सा कथन सही नहीं है?

- Ans 1. M, Q की दादी है।
 2. Q, T का पति है।
 3. S, Q का पिता है।
 4. C, S का मामा है।

Question ID : 264330102483

Option 1 ID : 264330402362

Option 2 ID : 264330402361

Option 3 ID : 264330402363

Option 4 ID : 264330402364

Status : Answered

Chosen Option : 2

Q.35 सात व्यक्ति तनु, रानो, बीना, शिरीन, कनक, आदित्य और अंशुल एक सीधी पंक्ति में उत्तर की ओर मुख करके बैठे हैं। तनु के बाईं ओर केवल दो व्यक्ति बैठे हैं। तनु और रानो के बीच केवल तीन व्यक्ति बैठे हैं। बीना, शिरीन के दाईं ओर दूसरे स्थान पर बैठी है। बीना, रानो की निकटतम पड़ोसी है। कनक, आदित्य के दाईं ओर ठीक बगल में बैठी है।
 पंक्ति के दाएं छोर पर कौन बैठा/बैठी है?

- Ans 1. रानो
 2. अंशुल
 3. आदित्य
 4. कनक

Question ID : 26433082295

Option 1 ID : 264330323014

Option 2 ID : 264330323016

Option 3 ID : 264330323013

Option 4 ID : 264330323015

Status : Answered

Chosen Option : 1

Q.36 निम्नलिखित शब्दों को तार्किक और अर्थपूर्ण क्रम में दर्शाने वाले सही विकल्प का चयन करें।

1. उच्च माध्यमिक विद्यालय
2. प्राथमिक विद्यालय
3. माध्यमिक विद्यालय
4. किन्डरगार्टन
5. महाविद्यालय

- Ans 1. 4, 3, 2, 5, 1
 2. 4, 3, 2, 1, 5
 3. 2, 4, 3, 1, 5
 4. 4, 2, 3, 1, 5

Question ID : 264330132910

Option 1 ID : 264330520699

Option 2 ID : 264330520700

Option 3 ID : 264330520701

Option 4 ID : 264330520702

Status : Answered

Chosen Option : 4

Q.37 उस समुच्चय का चयन करें जिसमें दी गई संख्याएं आपस में उसी प्रकार संबंधित हैं, जिस प्रकार प्रश्न में दिए गए समुच्चय की संख्याएं आपस में संबंधित हैं।
(नोट: संख्याओं को उसके घटक अंकों में विभाजित किए बिना, पूर्ण संख्याओं पर ही गणितीय संक्रियाएँ की जानी चाहिए। जैसे 13 - मान लीजिए 13 पर गणितीय संक्रियाएँ जैसे कि 13 में जोड़ना/घटाना/गुणा करना आदि किया जा सकता है। 13 को 1 और 3 में तोड़कर और फिर 1 और 3 पर गणितीय संक्रियाएँ करने की अनुमति नहीं है।)
(6, 12, 9)
(7, 23, 15)

- Ans 1. (14, 12, 13)
 2. (12, 20, 8)
 3. (15, 7, 8)
 4. (20, 40, 60)

Question ID : 26433087041
Option 1 ID : 264330341805
Option 2 ID : 264330341806
Option 3 ID : 264330341808
Option 4 ID : 264330341807
Status : Answered
Chosen Option : 1

Q.38 उस विकल्प का चयन कीजिए जो नीचे दिए गए शब्दों के उस सही क्रम को दर्शाता है, जिस क्रम में वे अंग्रेजी शब्दकोश में आएंगे।

1. Fontina
2. Fondue
3. Fondled
4. Fondant
5. Fontanel
6. Fonder

- Ans 1. 6, 4, 3, 2, 5, 1
 2. 4, 6, 3, 5, 1, 2
 3. 6, 3, 4, 5, 1, 2
 4. 4, 6, 3, 2, 5, 1

Question ID : 264330144932
Option 1 ID : 264330567985
Option 2 ID : 264330567984
Option 3 ID : 264330567986
Option 4 ID : 264330567983
Status : Answered
Chosen Option : 4

Q.39 उस विकल्प का चयन करें जो तीसरे शब्द से उसी प्रकार संबंधित है जिस प्रकार दूसरा शब्द पहले शब्द से संबंधित है। (शब्दों को अर्थपूर्ण अंग्रेजी/हिन्दी शब्दों के रूप में माना जाना चाहिए और इन्हें शब्द में अक्षरों की संख्या/व्यंजनों की संख्या/स्वरों की संख्या के आधार पर एक-दूसरे से संबद्ध नहीं किया जाना चाहिए।)
घड़ी : समय :: कंपास : ?

- Ans 1. लंबाई
 2. दिशा
 3. हृदय दर
 4. वजन

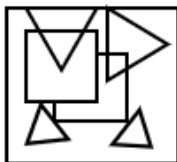
Question ID : 26433087284
Option 1 ID : 264330342774
Option 2 ID : 264330342776
Option 3 ID : 264330342775
Option 4 ID : 264330342773
Status : Answered
Chosen Option : 2

Q.40 उस विकल्प का चयन करें जिसमें दी गई आकृति सन्निहित है (घुमाने की अनुमति नहीं है)।

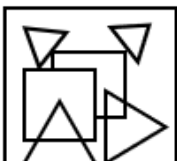


Ans

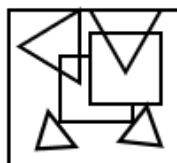
✗ 1.



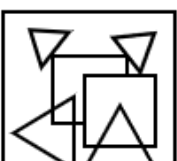
✗ 2.



✓ 3.



✗ 4.



Question ID : 264330132052

Option 1 ID : 264330517303

Option 2 ID : 264330517304

Option 3 ID : 264330517305

Option 4 ID : 264330517306

Status : Answered

Chosen Option : 3

Q.41 निम्नलिखित में से कौन-सी संख्या दी गई श्रृंखला में प्रश्न चिह्न (?) को प्रतिस्थापित करेगी?
5, 14, 17, ?, 37

Ans

✗ 1. 30

✓ 2. 34

✗ 3. 22

✗ 4. 20

Question ID : 26433082431

Option 1 ID : 264330323560

Option 2 ID : 264330323559

Option 3 ID : 264330323558

Option 4 ID : 264330323557

Status : Answered

Chosen Option : 1

Q.42 यदि '+' का अर्थ '-', '-' का अर्थ 'x', 'x' का अर्थ '+', 'x' का अर्थ '+' है, तो निम्नलिखित व्यंजक का मान ज्ञात करें।

$$7 - 12 + 72 \times 3 \div 11 = ?$$

Ans 1. 82

2. 71

3. 76

4. 66

Question ID : 264330130351

Option 1 ID : 264330510517

Option 2 ID : 264330510515

Option 3 ID : 264330510516

Option 4 ID : 264330510518

Status : Answered

Chosen Option : 2

Q.43 यदि 1 जनवरी 2017 को रविवार था, तो 1 जनवरी 2016 को सप्ताह का कौन-सा दिन था?

Ans 1. रविवार

2. गुरुवार

3. शनिवार

4. शुक्रवार

Question ID : 264330144945

Option 1 ID : 264330568038

Option 2 ID : 264330568035

Option 3 ID : 264330568037

Option 4 ID : 264330568036

Status : Answered

Chosen Option : 4

Q.44 दी गई आकृति में कितने त्रिभुज हैं?



Ans 1. 12

2. 13

3. 14

4. 15

Question ID : 26433068625

Option 1 ID : 264330269015

Option 2 ID : 264330269014

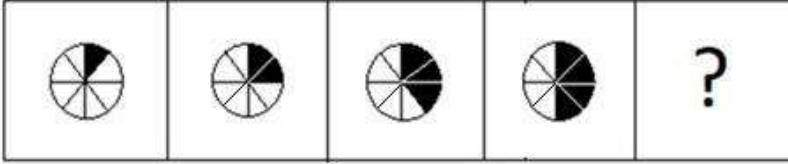
Option 3 ID : 264330269012

Option 4 ID : 264330269013

Status : Answered

Chosen Option : 4

Q.45 उस आकृति का चयन कीजिए जो निम्नांकित श्रृंखला में आगे आएगी।



Ans

- ✗ 1.
- ✗ 2.
- ✗ 3.
- ✓ 4.

Question ID : 264330122476
 Option 1 ID : 264330480030
 Option 2 ID : 264330480028
 Option 3 ID : 264330480027
 Option 4 ID : 264330480029

Status : Answered
 Chosen Option : 4

Q.46 उस विकल्प का चयन करें, जो छठी संख्या से उसी प्रकार संबंधित है, जिस प्रकार पहली संख्या दूसरी संख्या से और तीसरी संख्या चौथी संख्या से संबंधित है।
 44 : 4 :: 287 : 7 :: ? : 10

- ✓ 1. 890
- ✗ 2. 570
- ✗ 3. 639
- ✗ 4. 810

Question ID : 26433087212
 Option 1 ID : 264330342488
 Option 2 ID : 264330342486
 Option 3 ID : 264330342487
 Option 4 ID : 264330342485

Status : Answered
 Chosen Option : 1

Q.47 बिंदु A, बिंदु B से 30 m पूर्व में है। बिंदु C, बिंदु A से 43 m दक्षिण में है। बिंदु C, बिंदु D से 45 m पूर्व में है। बिंदु E, बिंदु D से 14 m दक्षिण में है। बिंदु F, बिंदु E से 35 m पूर्व में है। बिंदु F के सापेक्ष बिंदु B किस दिशा में है?

- Ans
- 1. पश्चिम
 - 2. उत्तर-पश्चिम
 - 3. दक्षिण-पश्चिम
 - 4. उत्तर-पूर्व

Question ID : 264330131628
Option 1 ID : 264330515614
Option 2 ID : 264330515611
Option 3 ID : 264330515613
Option 4 ID : 264330515612
Status : Answered
Chosen Option : 2

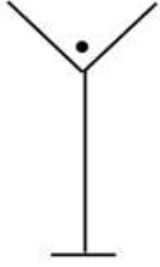
Q.48 दी गई श्रृंखला को पूरा करने के लिए कौन-सा अक्षर-समूह प्रश्नवाचक चिह्न (?) को प्रतिस्थापित करेगा?

TUWA, ?, RISI, QEQO, PAOU

- Ans
- 1. USEO
 - 2. SOUE
 - 3. UTET
 - 4. SUOE

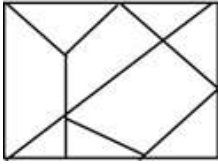
Question ID : 264330144907
Option 1 ID : 264330567884
Option 2 ID : 264330567886
Option 3 ID : 264330567883
Option 4 ID : 264330567885
Status : Answered
Chosen Option : 2

Q.49 उस विकल्प का चयन करें जिसमें दी गई आकृति अंतर्निहित है (घुमाने की अनुमति नहीं है)।

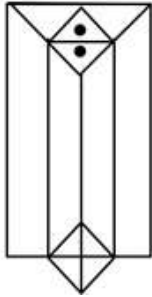


Ans

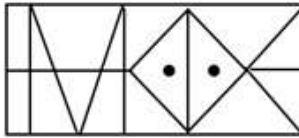
✗ 1.



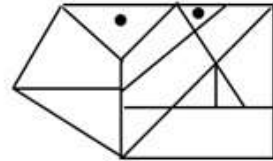
✓ 2.



✗ 3.



✗ 4.



Question ID : 264330111652

Option 1 ID : 264330438693

Option 2 ID : 264330438695

Option 3 ID : 264330438696

Option 4 ID : 264330438694

Status : Answered

Chosen Option : 2

Q.50 निम्नलिखित में से कौन-सा पद दी गई शृंखला में प्रश्न-चिह्न (?) को प्रतिस्थापित करेगा?
NLJ, JHF, FDB, BZX, ?

Ans ✓ 1. XVT

✗ 2. YVW

✗ 3. YUX

✗ 4. XUT

Question ID : 26433090152

Option 1 ID : 264330354085

Option 2 ID : 264330354088

Option 3 ID : 264330354086

Option 4 ID : 264330354087

Status : Answered

Chosen Option : 1

Q.1 'इफ गॉड वाज़ ए बैंकर' पुस्तक किसने लिखी है?

- Ans
- 1. झुम्पा लाहिड़ी
 - 2. अश्विन सांघी
 - 3. अमिताव घोष
 - 4. रवि सुब्रमण्यम

Question ID : 26433071713
 Option 1 ID : 264330281279
 Option 2 ID : 264330281276
 Option 3 ID : 264330281277
 Option 4 ID : 264330281278
 Status : Answered
 Chosen Option : 3

Q.2 निम्नलिखित में से कौन-सा एक सिंहली (श्रीलंकाई) वृत्तांत है, जो मौर्य साम्राज्य का एक महत्वपूर्ण साहित्यिक स्रोत है?

- Ans
- 1. अर्थशास्त्र (Arthasastra)
 - 2. महावंश (Mahavamsa)
 - 3. इंडिका (Indica)
 - 4. मुद्राराक्षस (Mudrarakshas)

Question ID : 264330165338
 Option 1 ID : 264330648434
 Option 2 ID : 264330648433
 Option 3 ID : 264330648432
 Option 4 ID : 264330648431
 Status : Answered
 Chosen Option : 2

Q.3 73वें संविधान संशोधन अधिनियम, 1992 के माध्यम से सरकार ने अनुच्छेद _____ में वर्णित संवैधानिक दायित्व को पूरा किया।

- Ans
- 1. 42
 - 2. 43
 - 3. 40
 - 4. 41

Question ID : 264330112782
 Option 1 ID : 264330443215
 Option 2 ID : 264330443216
 Option 3 ID : 264330443213
 Option 4 ID : 264330443214
 Status : Answered
 Chosen Option : 3

Q.4 निम्नलिखित में से किस पंचवर्षीय योजना में गरीबी उन्मूलन (गरीबी हटाओ) और आत्मनिर्भरता को प्रमुख योजना उद्देश्यों के रूप में घोषित किया गया था?

- Ans 1. पांचवीं पंचवर्षीय योजना
 2. छठी पंचवर्षीय योजना
 3. सातवीं पंचवर्षीय योजना
 4. आठवीं पंचवर्षीय योजना

Question ID : 264330111735
 Option 1 ID : 264330439025
 Option 2 ID : 264330439026
 Option 3 ID : 264330439027
 Option 4 ID : 264330439028
 Status : Answered
 Chosen Option : 1

Q.5 भारत में कृषि भूमि पर अत्यधिक दबाव के लिए निम्नलिखित में से कौन-से कारणों को जिम्मेदार ठहराया जा सकता है?

- a) विरासत का अधिकार
 b) अलाभकारी भूमि जोत का आकार
 c) भूमि का विभाजन
 d) बहु फसल

- Ans 1. a, c और d
 2. b, c और d
 3. केवल a और b
 4. a, b और c

Question ID : 264330166818
 Option 1 ID : 264330654310
 Option 2 ID : 264330654308
 Option 3 ID : 264330654307
 Option 4 ID : 264330654309
 Status : Answered
 Chosen Option : 2

Q.6 कॉलम-A और कॉलम-B के बीच निम्नलिखित में से कौन सा सही मेल है?

कॉलम-A (भूपर्पटी में तत्व)

कॉलम-B (भूपर्पटी में कुल %)

- | | |
|------------------|--------|
| i. ऑक्सीजन | a. 8% |
| ii. सिलिकॉन | b. 28% |
| iii. एल्युमिनियम | c. 47% |
| iv. आयरन | d. 5% |

- Ans 1. i-c, ii-a, iii-b, iv-d
 2. i-a, ii-b, iii-c, iv-d
 3. i-b, ii-a, iii-c, iv-d
 4. i-c, ii-b, iii-a, iv-d

Question ID : 264330111920
 Option 1 ID : 264330439767
 Option 2 ID : 264330439765
 Option 3 ID : 264330439766
 Option 4 ID : 264330439768
 Status : Answered
 Chosen Option : 3

Q.7 केंद्रशासित प्रदेश लद्दाख की झांकी नई दिल्ली में राजपथ पर पहली बार किस वर्ष प्रदर्शित की गई थी?

- Ans 1. 2019
 2. 2022
 3. 2020
 4. 2021

Question ID : 26433074084
Option 1 ID : 264330290456
Option 2 ID : 264330290457
Option 3 ID : 264330290458
Option 4 ID : 264330290459
Status : Answered
Chosen Option : 2

Q.8 शरीर की प्रतिरक्षा प्रणाली किस स्थिति में वास्तविक आंतर फैक्टर प्रोटीन या आपके आमाशय की परत में इसे बनाने वाली कोशिकाओं पर हमला करती है?

- Ans 1. वर्निक-कोर्साकोफ सिंड्रोम (Wernicke-Korsakoff syndrome)
 2. यकृत सिरोसिस (Hepatic cirrhosis)
 3. हार्टनप रोग (Hartnup disorder)
 4. प्रणाशी अरक्तता (Pernicious anaemia)

Question ID : 264330131720
Option 1 ID : 264330515981
Option 2 ID : 264330515979
Option 3 ID : 264330515982
Option 4 ID : 264330515980
Status : Answered
Chosen Option : 1

Q.9 मार्च 2023 तक प्राप्त जानकारी के अनुसार, केंद्रीय पर्यटन मंत्री कौन हैं?

- Ans 1. स्मृति ईरानी
 2. जी. किशन रेड्डी
 3. हरदीप पुरी
 4. गजेन्द्र सिंह शेखावत

Question ID : 264330165220
Option 1 ID : 264330647979
Option 2 ID : 264330647980
Option 3 ID : 264330647982
Option 4 ID : 264330647981
Status : Answered
Chosen Option : 2

Q.10 श्री नारायण गुरु ने जाति और धर्म के आधार पर होने वाले भेदों को निरर्थक माना और सभी के लिए 'एक जाति, एक धर्म और एक भगवान' के सिद्धांत का समर्थन किया। वह निम्नलिखित में से किस संगठन से संबंधित थे?

- Ans
- 1. ब्रह्म समाज
 - 2. आर्य समाज
 - 3. वेद समाज
 - 4. श्री नारायण धर्म परिपालन योगम

Question ID : 264330165402
 Option 1 ID : 264330648690
 Option 2 ID : 264330648689
 Option 3 ID : 264330648688
 Option 4 ID : 264330648687
 Status : Answered
 Chosen Option : 4

Q.11 निम्नलिखित में से किस अधिनियम को मॉर्ले-मिंटो सुधार के रूप में भी जाना जाता है?

- Ans
- 1. भारतीय परिषद अधिनियम, 1892
 - 2. भारत सरकार अधिनियम, 1919
 - 3. भारत सरकार अधिनियम, 1935
 - 4. भारतीय परिषद अधिनियम, 1909

Question ID : 264330111396
 Option 1 ID : 264330437670
 Option 2 ID : 264330437672
 Option 3 ID : 264330437671
 Option 4 ID : 264330437669
 Status : Answered
 Chosen Option : 4

Q.12 भारत के योजना आयोग (2011-12) के अनुसार, चंडीगढ़ में गरीबी रेखा से नीचे की जनसंख्या का प्रतिशत कितना है?

- Ans
- 1. 9.91%
 - 2. 21.81%
 - 3. 2.77%
 - 4. 9.86%

Question ID : 264330119917
 Option 1 ID : 264330469944
 Option 2 ID : 264330469946
 Option 3 ID : 264330469945
 Option 4 ID : 264330469943
 Status : Answered
 Chosen Option : 3

Q.13 भारत के योजना आयोग (2011-2012) के अनुसार, राज्यों के निम्नलिखित में से किस समूह में गरीबी रेखा के नीचे की जनसंख्या का प्रतिशत सर्वाधिक है?

- Ans
- 1. गुजरात और हरियाणा
 - 2. केरल और पंजाब
 - 3. बिहार और ओडिशा
 - 4. छत्तीसगढ़ और झारखंड

Question ID : 264330119921

Option 1 ID : 264330469961

Option 2 ID : 264330469962

Option 3 ID : 264330469959

Option 4 ID : 264330469960

Status : Answered

Chosen Option : 3

Q.14 हड़प्पा सभ्यता की जलनिकासी व्यवस्था के संबंध में दिए गए कथनों के आधार पर सही विकल्प का चयन कीजिए।

कथन I: हड़प्पा के अधिकांश शहरों में घरों के बाहर खुली जलनिकासी व्यवस्था थी।

कथन II: हड़प्पा सभ्यता में, जल और अपशिष्ट घरों के बाहर स्थित नालियों से निकलकर मुख्य भूमिगत नाली में चला जाता था।

- Ans
- 1. केवल कथन II सत्य है।
 - 2. न तो कथन I सत्य है और न ही कथन II सत्य है।
 - 3. कथन I और कथन II दोनों सत्य हैं।
 - 4. केवल कथन I सत्य है।

Question ID : 264330141807

Option 1 ID : 264330555548

Option 2 ID : 264330555550

Option 3 ID : 264330555549

Option 4 ID : 264330555547

Status : Answered

Chosen Option : 3

Q.15 निम्नलिखित में से किस राज्य में सत्रीया नृत्य शैली प्रसिद्ध है?

- Ans
- 1. तमिलनाडु
 - 2. असम
 - 3. पंजाब
 - 4. हिमाचल प्रदेश

Question ID : 264330109268

Option 1 ID : 264330429350

Option 2 ID : 264330429351

Option 3 ID : 264330429352

Option 4 ID : 264330429349

Status : Answered

Chosen Option : 2

Q.16 'गोल' (Goal) _____ की आत्मकथा है।

- Ans 1. मेजर ध्यानचंद
 2. क्रिस्टियानो रोनाल्डो
 3. माइक टॉयसन
 4. मैरी कॉम

Question ID : 264330110327
 Option 1 ID : 264330433586
 Option 2 ID : 264330433588
 Option 3 ID : 264330433585
 Option 4 ID : 264330433587
 Status : Answered
 Chosen Option : 2

Q.17 कुछ कोशिका प्रकारों में कौन-सी संरचना परत मुख्य रूप से सेल्युलोज, हेमीसेल्युलोज और लिग्निन जैसे कार्बोहाइड्रेट के 4 : 3 : 3 के अनुपात में और मोम जैसे कुछ वसायुक्त पदार्थों से बनी होती है?

- Ans 1. कोशिका भिं
 2. केंद्रक आवरण
 3. प्लाज्मा झिल्ली
 4. कोशिकाविलेय

Question ID : 264330113472
 Option 1 ID : 264330445976
 Option 2 ID : 264330445975
 Option 3 ID : 264330445974
 Option 4 ID : 264330445973
 Status : Answered
 Chosen Option : 1

Q.18 किस पेशवा ने ईस्ट इंडिया कंपनी के साथ बेसिन की संधि (वसई की संधि) पर हस्ताक्षर किए थे?

- Ans 1. नारायण राव
 2. माधव राव
 3. रघुनाथ राव
 4. बाजीराव द्वितीय

Question ID : 264330112186
 Option 1 ID : 264330440832
 Option 2 ID : 264330440829
 Option 3 ID : 264330440831
 Option 4 ID : 264330440830
 Status : Answered
 Chosen Option : 4

Q.19 भारतीय रिजर्व बैंक का राष्ट्रीयकरण कब हुआ था?

- Ans 1. 1 जनवरी 1949 को
 2. 1 मार्च 1949 को
 3. 1 अक्टूबर 1949 को
 4. 1 अप्रैल 1949 को

Question ID : 264330109975
 Option 1 ID : 264330432179
 Option 2 ID : 264330432178
 Option 3 ID : 264330432177
 Option 4 ID : 264330432180
 Status : Answered
 Chosen Option : 1

Q.20 निम्नलिखित में से किस उद्योग में बिक्री के उद्देश्य से पादपों और पशुओं की कुछ निश्चित प्रजातियों का प्रजनन और वर्धन किया जाता है?

- Ans
- 1. निर्माण
 - 2. दोहक
 - 3. जननिक
 - 4. प्राथमिक

Question ID : 264330163215
 Option 1 ID : 264330640172
 Option 2 ID : 264330640173
 Option 3 ID : 264330640174
 Option 4 ID : 264330640171
 Status : Answered
 Chosen Option : 3

Q.21 श्री एस एल भैरप्पा ने किस क्षेत्र में उच्च कोटि की विशिष्ट सेवा के लिए वर्ष 2023 में पद्म भूषण प्राप्त किया?

- Ans
- 1. व्यापार एवं उद्योग
 - 2. सामाजिक कार्य
 - 3. साहित्य एवं शिक्षा
 - 4. विज्ञान एवं अभियांत्रिकी

Question ID : 264330137290
 Option 1 ID : 264330537787
 Option 2 ID : 264330537790
 Option 3 ID : 264330537789
 Option 4 ID : 264330537788
 Status : Answered
 Chosen Option : 2

Q.22 द्वितीय पंचवर्षीय योजना के दौरान विदेशी सहयोग से कितने एकीकृत इस्पात संयंत्र स्थापित किए गए?

- Ans
- 1. 9
 - 2. 3
 - 3. 6
 - 4. 5

Question ID : 264330163213
 Option 1 ID : 264330640163
 Option 2 ID : 264330640165
 Option 3 ID : 264330640164
 Option 4 ID : 264330640166
 Status : Answered
 Chosen Option : 2

Q.23 जब आरबीआई (RBI) रेपो दर को कम करने का निर्णय लेता है, तो मुद्रा आपूर्ति _____।

- Ans
- 1. शुरू में स्थिर रहेगी और फिर कमी होगी
 - 2. अप्रभावित रहेगी
 - 3. में कमी होगी
 - 4. में बढ़ोतरी होगी

Question ID : 264330109093
 Option 1 ID : 264330428652
 Option 2 ID : 264330428651
 Option 3 ID : 264330428650
 Option 4 ID : 264330428649
 Status : Answered
 Chosen Option : 4

Q.24 विजयनगर साम्राज्य में आय का प्रमुख स्रोत क्या था?

- Ans 1. भू राजस्व
 2. आयात शुल्क
 3. औद्योगिक शुल्क
 4. खनन

Question ID : 264330109018

Option 1 ID : 264330428352

Option 2 ID : 264330428350

Option 3 ID : 264330428349

Option 4 ID : 264330428351

Status : Answered

Chosen Option : 1

Q.25 'गुग्गा (गोगा) नवमी' - हरियाणा और पंजाब, राजस्थान, यूपी एवं हिमाचल प्रदेश के कुछ हिस्सों में मनाया जाने वाला त्योहार है। इसे _____ के त्योहार के रूप में जाना जाता है?

- Ans 1. गाय पूजा
 2. उल्लू पूजा
 3. नाग पूजा
 4. ऊँट पूजा

Question ID : 264330111157

Option 1 ID : 264330436716

Option 2 ID : 264330436714

Option 3 ID : 264330436713

Option 4 ID : 264330436715

Status : Answered

Chosen Option : 4

Q.26 पद्म भूषण, गुरु वेम्पति चिन्ना सत्यम निम्नलिखित में से किस नृत्य शैली में सैकड़ों छात्रों को प्रशिक्षित करने के लिए प्रसिद्ध हैं?

- Ans 1. कथक
 2. भरतनाट्यम
 3. कुचिपुड़ी
 4. ओडिसी

Question ID : 26433099202

Option 1 ID : 264330389421

Option 2 ID : 264330389423

Option 3 ID : 264330389422

Option 4 ID : 264330389424

Status : Answered

Chosen Option : 2

Q.27 निम्नलिखित में से किस गायक को भारत-रत्न से सम्मानित किया गया है?

- Ans 1. लता मंगेशकर
 2. मोहम्मद रफ़ी
 3. आशा भोंसले
 4. मुकेश

Question ID : 26433064244
 Option 1 ID : 264330251569
 Option 2 ID : 264330251570
 Option 3 ID : 264330251568
 Option 4 ID : 264330251571
 Status : Answered
 Chosen Option : 2

Q.28 राष्ट्रीय भारतीय शास्त्रीय नृत्य संस्थान द्वारा निम्नलिखित में से कौन-सा पुरस्कार प्रदान किया जाता है?

- Ans 1. टैगोर रत्न पुरस्कार
 2. अभिनंदन सरोजा पुरस्कार
 3. पद्म विभूषण
 4. संगीत नाटक अकादमी पुरस्कार

Question ID : 264330157012
 Option 1 ID : 264330615424
 Option 2 ID : 264330615425
 Option 3 ID : 264330615426
 Option 4 ID : 264330615423
 Status : Answered
 Chosen Option : 4

Q.29 पश्चिम बंगाल के मैंग्रोव वनों को _____ भी कहा जाता है।

- Ans 1. साल
 2. शोला
 3. शीशम
 4. सुंदरबन

Question ID : 264330170000
 Option 1 ID : 264330666675
 Option 2 ID : 264330666677
 Option 3 ID : 264330666678
 Option 4 ID : 264330666676
 Status : Answered
 Chosen Option : 4

Q.30 निम्नलिखित का मिलान कीजिए।

- | | |
|--------------------------------|--------------------|
| i) गिर राष्ट्रीय उद्यान | a) गैंडे |
| ii) राजाजी राष्ट्रीय उद्यान | b) साइबेरियन क्रेन |
| iii) केवलादेव राष्ट्रीय उद्यान | c) शेर |
| iv) काजीरंगा राष्ट्रीय उद्यान | d) हाथी |

- Ans
- 1. i-d, ii-c, iii-a, iv-b
 - 2. i-d, ii-b, iii-c, iv-a
 - 3. i-c, ii-d, iii-b, iv-a
 - 4. i-a, ii-b, iii-c, iv-d

Question ID : 264330166803

Option 1 ID : 264330654250

Option 2 ID : 264330654247

Option 3 ID : 264330654248

Option 4 ID : 264330654249

Status : Answered

Chosen Option : 3

Q.31 जुलाई 1968 में, भारत की तत्कालीन प्रधानमंत्री, इंदिरा गांधी ने कृषि में हरित क्रांति की प्रभावशीलता को आधिकारिक रूप से दर्ज करने के लिए _____ नाम से एक विशेष डाक टिकट जारी किया था।

- Ans
- 1. गेहूँ क्रांति
 - 2. फसल क्रांति
 - 3. हरित क्रांति
 - 4. ग्रीन रिवॉल्यूशन

Question ID : 26433064537

Option 1 ID : 264330252741

Option 2 ID : 264330252743

Option 3 ID : 264330252742

Option 4 ID : 264330252740

Status : Answered

Chosen Option : 4

Q.32 भारतीय ओलंपिक संघ किससे संबद्ध है?

- Ans
- 1. अंतरराष्ट्रीय ओलंपिक समिति
 - 2. अंतरराष्ट्रीय ओलंपिक परिषद
 - 3. अंतरराष्ट्रीय ओलंपिक संघ
 - 4. अंतरराष्ट्रीय ओलंपिक महासंघ

Question ID : 264330110383

Option 1 ID : 264330433811

Option 2 ID : 264330433809

Option 3 ID : 264330433810

Option 4 ID : 264330433812

Status : Answered

Chosen Option : 3

Q.33 1833 में, कार्ल फ्रेडरिक गॉस और विल्हेम एडवर्ड वेबर ने किस उपकरण का आविष्कार किया था?

- Ans
- 1. प्रकाशीय मेसर
 - 2. ट्रान्जिस्टर
 - 3. कण त्वरक
 - 4. विद्युत चुंबकीय टेलीग्राफ

Question ID : 264330141664
 Option 1 ID : 264330554978
 Option 2 ID : 264330554976
 Option 3 ID : 264330554975
 Option 4 ID : 264330554977
 Status : Answered
 Chosen Option : 4

Q.34 कौन-सा अनुच्छेद उपराष्ट्रपति के निर्वाचन से संबंधित है?

- Ans
- 1. अनुच्छेद 70
 - 2. अनुच्छेद 66
 - 3. अनुच्छेद 74
 - 4. अनुच्छेद 52

Question ID : 264330165198
 Option 1 ID : 264330647891
 Option 2 ID : 264330647892
 Option 3 ID : 264330647893
 Option 4 ID : 264330647894
 Status : Answered
 Chosen Option : 2

Q.35 निम्नलिखित में से किस वाद्य यंत्र की कला को उस्ताद अल्ला रक्खा कुरैशी ने लोकप्रिय बनाया है?

- Ans
- 1. बांसुरी
 - 2. तबला
 - 3. संतूर
 - 4. शहनाई

Question ID : 264330144836
 Option 1 ID : 264330567601
 Option 2 ID : 264330567599
 Option 3 ID : 264330567602
 Option 4 ID : 264330567600
 Status : Answered
 Chosen Option : 3

Q.36 निम्नलिखित में से कौन-सा आश्रमोपासना संघ का सदस्य नहीं है?

- Ans
- 1. तितली
 - 2. झींगा
 - 3. टिड्डी
 - 4. घोंघा

Question ID : 264330131701
 Option 1 ID : 264330515903
 Option 2 ID : 264330515905
 Option 3 ID : 264330515904
 Option 4 ID : 264330515906
 Status : Answered
 Chosen Option : 4

Q.37 दो या दो से अधिक राज्यों के बीच विवाद, सर्वोच्च न्यायालय के _____ के अधीन आता है।

- Ans 1. सलाहकार क्षेत्राधिकार
 2. मौलिक क्षेत्राधिकार
 3. रिट क्षेत्राधिकार
 4. अपीली क्षेत्राधिकार

Question ID : 264330130786
 Option 1 ID : 264330512256
 Option 2 ID : 264330512258
 Option 3 ID : 264330512255
 Option 4 ID : 264330512257
 Status : Answered
 Chosen Option : 2

Q.38 सौर ऊर्जा भंडारण क्षमता वाली मोमबत्तियाँ और पैराफिन मोम बनाने के लिए 20 कार्बन परमाणुओं से बना कौन-सा असंतृप्त ऐलिफैटिक हाइड्रोकार्बन उपयोग किया जाता है ?

- Ans 1. नोनेन (Nonane)
 2. आइकोसेन (Eicosane)
 3. ट्राइकोन्टेन (Triacontane)
 4. ऑक्टेन (Octane)

Question ID : 264330165459
 Option 1 ID : 264330648915
 Option 2 ID : 264330648916
 Option 3 ID : 264330648918
 Option 4 ID : 264330648917
 Status : Answered
 Chosen Option : 3

Q.39 भारत ने दूसरी बार एशियाई खेलों का आयोजन किस वर्ष में किया था?

- Ans 1. 1976 म
 2. 1951 म
 3. 1984 म
 4. 1982 म

Question ID : 264330110367
 Option 1 ID : 264330433746
 Option 2 ID : 264330433745
 Option 3 ID : 264330433748
 Option 4 ID : 264330433747
 Status : Answered
 Chosen Option : 3

Q.40 निम्नलिखित में से कौन-सी एक क्षारीय मृदा धातु नहीं है?

- Ans 1. Mg
 2. Be
 3. Na
 4. Ca

Question ID : 264330131781
 Option 1 ID : 264330516224
 Option 2 ID : 264330516223
 Option 3 ID : 264330516226
 Option 4 ID : 264330516225
 Status : Answered
 Chosen Option : 1

Q.41 लिम्बा राम किस खेल से संबंधित हैं?

- Ans 1. तीरंदाजी
 2. बेडमिंटन
 3. पोलो
 4. एथलेटिक्स

Question ID : 264330110387
 Option 1 ID : 264330433828
 Option 2 ID : 264330433825
 Option 3 ID : 264330433827
 Option 4 ID : 264330433826
 Status : Answered
 Chosen Option : 4

Q.42 दिसंबर 2022 में, किसने गुजरात के 17वें मुख्यमंत्री के रूप में शपथ ली?

- Ans 1. भूपेंद्र रजनीकांत पटेल
 2. आनंदीबेन पटेल
 3. हार्दिक पटेल
 4. विजय रुपाणी

Question ID : 264330158510
 Option 1 ID : 264330621399
 Option 2 ID : 264330621401
 Option 3 ID : 264330621402
 Option 4 ID : 264330621400
 Status : Answered
 Chosen Option : 4

Q.43 "महाभाष्य" के लेखक कौन थे?

- Ans 1. बाण
 2. पतंजलि
 3. कौटिल्य
 4. पाणिनी

Question ID : 264330112145
 Option 1 ID : 264330440668
 Option 2 ID : 264330440667
 Option 3 ID : 264330440666
 Option 4 ID : 264330440665
 Status : Answered
 Chosen Option : 4

Q.44 मानक तीरंदाजी स्पर्धा में प्रयुक्त होने वाले लक्ष्य में कितने वृत्त क्षेत्र होते हैं?

- Ans 1. 12
 2. 8
 3. 10
 4. 15

Question ID : 264330119291
 Option 1 ID : 264330467452
 Option 2 ID : 264330467451
 Option 3 ID : 264330467454
 Option 4 ID : 264330467453
 Status : Answered
 Chosen Option : 2

Q.45 निम्नलिखित कथनों में से कौन-सा सत्य है?

कथन I: शास्त्रीय नृत्यों में रस और भाव जैसी भारतीय तकनीकों की उत्पत्ति भरतमुनि के नाट्यशास्त्र में हुई है।

कथन II: भरतनाट्यम की उत्पत्ति ओडिशा में हुई है।

- Ans
- 1. न तो कथन I सत्य है और न ही कथन II सत्य है।
 - 2. केवल कथन II सत्य है।
 - 3. केवल कथन I सत्य है।
 - 4. कथन I और कथन II दोनों सत्य हैं।

Question ID : 264330141760

Option 1 ID : 264330555362

Option 2 ID : 264330555360

Option 3 ID : 264330555359

Option 4 ID : 264330555361

Status : Answered

Chosen Option : 3

Q.46 DFC का पूर्ण रूप क्या है?

- Ans
- 1. Detritus Food Chain (डेट्रिटस फूड चेन)
 - 2. Dangerous Food Chain (डेंजरस फूड चेन)
 - 3. Dead Food Chain (डेड फूड चेन)
 - 4. Dark Food Chain (डार्क फूड चेन)

Question ID : 264330111559

Option 1 ID : 264330438323

Option 2 ID : 264330438324

Option 3 ID : 264330438321

Option 4 ID : 264330438322

Status : Answered

Chosen Option : 1

Q.47 इनमें से कौन 'तमस' नामक उपन्यास के रचयिता हैं?

- Ans
- 1. राही मासूम रज़ा
 - 2. भीष्म साहनी
 - 3. मोहन राकेश
 - 4. हरिशंकर परसाई

Question ID : 264330144839

Option 1 ID : 264330567611

Option 2 ID : 264330567613

Option 3 ID : 264330567614

Option 4 ID : 264330567612

Status : Answered

Chosen Option : 1

Q.48 इंडिया गेट, जिसे अखिल भारतीय युद्ध स्मारक भी कहा जाता है, को किसने डिजाइन किया था?

- Ans 1. एडविन लुटियंस
 2. फ्रेड्रिक फ़ोर्सिथ
 3. चार्ल्स कोरी
 4. जॉन टेलर

Question ID : 26433064400
 Option 1 ID : 264330252193
 Option 2 ID : 264330252195
 Option 3 ID : 264330252192
 Option 4 ID : 264330252194
 Status : Answered
 Chosen Option : 1

Q.49 निम्नलिखित में से किस परत में ओजोन होती है?

- Ans 1. क्षोभमंडल
 2. तापमंडल
 3. मध्यमंडल
 4. समतापमंडल

Question ID : 264330117621
 Option 1 ID : 264330462511
 Option 2 ID : 264330462512
 Option 3 ID : 264330462510
 Option 4 ID : 264330462509
 Status : Answered
 Chosen Option : 4

Q.50 सक्रिय विलेय परिवहन द्वारा निर्मित परासरणी प्रवणता की प्रतिक्रिया में कोशिका झिल्ली में जल परिवहन किस चैनल प्रोटीन का प्राथमिक कार्य है?

- Ans 1. ऐक्वापोरिन (Aquaporins)
 2. क्यूप्रेडॉक्सिन (Cupredoxins)
 3. ट्रांसफेरिन (Transferrin)
 4. म्यूसिन (Mucins)

Question ID : 264330113466
 Option 1 ID : 264330445951
 Option 2 ID : 264330445950
 Option 3 ID : 264330445949
 Option 4 ID : 264330445952
 Status : Answered
 Chosen Option : 2

Q.1 Select the most appropriate option that can substitute the underlined segment in the given sentence.

No sooner had I reached the station when the train started moving.

- Ans 1. when the train had started moving
 2. then the train had started moving
 3. when the train start moving
 4. than the train started moving

Question ID : 264330117324

Option 1 ID : 264330461353

Option 2 ID : 264330461354

Option 3 ID : 264330461356

Option 4 ID : 264330461355

Status : Answered

Chosen Option : 4

Q.2 Select the option that expresses the given sentence in passive voice.

The stranger had intended the execution of the plot but the boys thwarted it with their subtlety.

- Ans 1. The execution of the plot was being intended by the stranger but it has been thwarted by the boys with their subtlety.
 2. The execution of the plot had been intended by the stranger but it was thwarted by the boys with their subtlety.
 3. The execution of the plot could have been intended by the stranger but it was being thwarted by the boys with their subtlety.
 4. The execution of the plot was intended by the stranger but it had been thwarted by the boys with their subtlety.

Question ID : 264330136446

Option 1 ID : 264330534546

Option 2 ID : 264330534543

Option 3 ID : 264330534545

Option 4 ID : 264330534544

Status : Answered

Chosen Option : 2

Q.3 Identify the ANTONYM of the following word in the given sentence.

Humility

The little girl was humble enough to negate the ideology of her classmate whose arrogance was indomitable.

- Ans 1. negate
 2. arrogance
 3. humble
 4. indomitable

Question ID : 264330167913

Option 1 ID : 264330658572

Option 2 ID : 264330658573

Option 3 ID : 264330658571

Option 4 ID : 264330658574

Status : Answered

Chosen Option : 2

Q.4 Parts of the following sentence have been given as options. Select the option that contains an error.

Yesterday, I went to the store and buy some groceries.

- Ans
- 1. Yesterday
 - 2. to the store and
 - 3. I went
 - 4. buy some groceries

Question ID : 264330164556

Option 1 ID : 264330645411

Option 2 ID : 264330645413

Option 3 ID : 264330645412

Option 4 ID : 264330645414

Status : Answered

Chosen Option : 4

Q.5 Sentences of a paragraph are given below. While the first and the last sentences (S1 and S6) are in the correct order, the sentences in between are jumbled up. Arrange the sentences in the correct order to form a meaningful and coherent paragraph.

S1. Generation gap is actually the difference between the ebullience of youth on the one hand and the caution and prudence of old age on the other.

A. Or, it is expression of the rivalry between the old and the young.

B. The old declare the younger lot to be arrogant fools; the young declare the older people to be senile and insipid.

C. The old want to prolong their hold on authority while the young are over-eager to grab it.

D. The gulf between the two generations cannot be bridged.

S6. However, in modern times, lifestyles are changing so fast that the gap between any two successive generations becomes easily perceptible.

- Ans
- 1. CABD
 - 2. CDBA
 - 3. CBAD
 - 4. ACBD

Question ID : 264330117464

Option 1 ID : 264330461886

Option 2 ID : 264330461885

Option 3 ID : 264330461888

Option 4 ID : 264330461887

Status : Answered

Chosen Option : 1

Q.6 Select the option that expresses the following sentence in passive voice.

The audience loudly cheered the student leader's speech.

- Ans
- 1. The student leader was loudly cheered by the audience.
 - 2. They all cheered loudly the leader's speech.
 - 3. There was a loud cheer for the student.
 - 4. The student leader's speech was loudly cheered by the audience.

Question ID : 264330164200

Option 1 ID : 264330644048

Option 2 ID : 264330644049

Option 3 ID : 264330644047

Option 4 ID : 264330644050

Status : Answered

Chosen Option : 4

Q.7 Select the option that expresses the following sentence in indirect speech.
She said to me, "I have often told you not to play with fire."

- Ans 1. She told me that she had often told me not to play with fire.
 2. She said to me that she has often told me not to play with fire.
 3. She asked me that she had often told me not to play with fire.
 4. She told me that she has often told me not to play with fire.

Question ID : 264330157048
Option 1 ID : 264330615567
Option 2 ID : 264330615569
Option 3 ID : 264330615568
Option 4 ID : 264330615570
Status : Answered
Chosen Option : 1

Q.8 Select the most appropriate option that can substitute the underlined segment in the given sentence.
They wondered about in sheepskins and goatskins in those days.

- Ans 1. wondered in
 2. wandered in
 3. wander about in
 4. wandered about in

Question ID : 264330122675
Option 1 ID : 264330480811
Option 2 ID : 264330480812
Option 3 ID : 264330480814
Option 4 ID : 264330480813
Status : Answered
Chosen Option : 1

Q.9 Select the most appropriate option that can substitute the underlined segment in the given sentence.

My brother is resembling my mother.

- Ans 1. had resembled
 2. was resembling
 3. resembles
 4. had been resembling

Question ID : 264330102393
Option 1 ID : 264330402037
Option 2 ID : 264330402039
Option 3 ID : 264330402038
Option 4 ID : 264330402040
Status : Answered
Chosen Option : 3

Q.10 The following sentence has been divided into parts. One of them may contain an error. Select the part that contains the error from the given options. If you don't find any error, mark 'No error' as your answer.
The Arabian Nights / have / many interesting stories for readers.

- Ans
- 1. The Arabian Nights
 - 2. many interesting stories for readers
 - 3. have
 - 4. No error

Question ID : 264330123029

Option 1 ID : 264330482179

Option 2 ID : 264330482181

Option 3 ID : 264330482180

Option 4 ID : 264330482182

Status : Answered

Chosen Option : 3

Q.11 Select the option that expresses the given sentence in indirect speech.
Riya asked, "Are you feeling fine?"

- Ans
- 1. Riya asked her if she was feeling fine.
 - 2. Riya asked me if I was feeling fine.
 - 3. Riya asked me if I was feeling fine?
 - 4. Riya told me if I was feeling fine.

Question ID : 264330168335

Option 1 ID : 264330660203

Option 2 ID : 264330660206

Option 3 ID : 264330660204

Option 4 ID : 264330660205

Status : Answered

Chosen Option : 2

Q.12 Select the option that expresses the given sentence in active voice.
Will the gift be delivered by her?

- Ans
- 1. Will she deliver the gift?
 - 2. Will she have the gift delivered?
 - 3. Will she have delivered the gift?
 - 4. Will she delivered the gift?

Question ID : 264330164369

Option 1 ID : 264330644690

Option 2 ID : 264330644687

Option 3 ID : 264330644688

Option 4 ID : 264330644689

Status : Answered

Chosen Option : 1

Q.13 In question, four alternatives are given for the idiom under in the sentence. Choose the alternative which best expresses the meaning of the underlined idiom.
Mr. Avinash is very nice and friendly, but his brother is very toffee-nosed.

- Ans
- 1. A person who thinks he is intelligent and perfect
 - 2. A person who is arrogant and cruel
 - 3. A person who never trusts anyone
 - 4. A person who thinks he is of a high social class and looks down on people of lower class

Question ID : 264330134120

Option 1 ID : 264330525505

Option 2 ID : 264330525503

Option 3 ID : 264330525506

Option 4 ID : 264330525504

Status : Answered

Chosen Option : 2

Q.14 Select the correct option to substitute the underlined segment in the given sentence. If no substitution is required, select 'No substitution'.

"Speak slow lest you will wake up mommy", said Emily to Tess.

- Ans
- 1. should
 - 2. would
 - 3. could
 - 4. No substitution

Question ID : 26433090826

Option 1 ID : 264330356726

Option 2 ID : 264330356727

Option 3 ID : 264330356725

Option 4 ID : 264330356728

Status : Answered

Chosen Option : 1

Q.15 Select the most appropriate option that can substitute the underlined segment in the given sentence.

The scientist says that while the complete core meltdown at Chernobyl was a major disaster, it had fall far short of catastrophe many nuclear power critics had feared, the so-called 'China Syndrome'.

- Ans
- 1. it fell far shorter of the catastrophe
 - 2. it fell much short of the catastrophe
 - 3. it fell far away of the catastrophe
 - 4. it fell far short of the catastrophe

Question ID : 264330120590

Option 1 ID : 264330472606

Option 2 ID : 264330472605

Option 3 ID : 264330472604

Option 4 ID : 264330472603

Status : Answered

Chosen Option : 4

Q.16 Select the option that expresses the given sentence in direct speech.
My mother asked me, "Who is the new Mathematics teacher?"

- Ans
- 1. My mother asked me who new the Mathematics teacher was.
 - 2. My mother asked me who the new Mathematics teacher is.
 - 3. My mother asked me who the new Mathematics teacher was.
 - 4. My mother asked me who the new Mathematics teacher were.

Question ID : 264330137239
Option 1 ID : 264330537589
Option 2 ID : 264330537587
Option 3 ID : 264330537590
Option 4 ID : 264330537588
Status : Answered
Chosen Option : 3

Q.17 Select the option that expresses the given sentence in passive voice.
I kicked the ball.

- Ans
- 1. The ball was kicked by me.
 - 2. The ball is kicked by me.
 - 3. The ball was kicked by you.
 - 4. The ball had been kicked by me.

Question ID : 264330168328
Option 1 ID : 264330660176
Option 2 ID : 264330660175
Option 3 ID : 264330660178
Option 4 ID : 264330660177
Status : Answered
Chosen Option : 1

Q.18 Select the most appropriate option to substitute the underlined segment in the given sentence.
Physical activity has been projected to be helpful on avoidance of depression, by the experts.

- Ans
- 1. projected to be helpful of avoidance
 - 2. projected to be helpful for avoidance
 - 3. projected to be helpful in the avoidance
 - 4. projected to be helpful about avoidance

Question ID : 264330117040
Option 1 ID : 264330460244
Option 2 ID : 264330460243
Option 3 ID : 264330460241
Option 4 ID : 264330460242
Status : Answered
Chosen Option : 1

Q.19 The following sentence has been divided into parts. One of them may contain an error. Select the part that contains the error from the given options.
She has been speaking / four languages / very fluent / since childhood.

- Ans 1. four languages
 2. very fluent
 3. since childhood.
 4. She has been speaking

Question ID : 264330164237
Option 1 ID : 264330644180
Option 2 ID : 264330644181
Option 3 ID : 264330644182
Option 4 ID : 264330644179
Status : Answered
Chosen Option : 1

Q.20 Sentences of a paragraph are given below in jumbled order. Arrange the sentences in the correct order to form a meaningful and coherent paragraph.

- A. Following the demise of the Indus Valley civilisation, the Aryans migrated to India.
B. There is proof that the Aryans possessed a scientific outlook.
C. They held that the universe was regulated by a natural law known as Panchbhutas (five components).
D. Prithvi (heart), Ap (water), Tejas (heat), Vayu (air), and Akasa (sky) are these factors.

- Ans 1. CDAB
 2. BCDA
 3. ABCD
 4. DBCA

Question ID : 26433098150
Option 1 ID : 264330385256
Option 2 ID : 264330385254
Option 3 ID : 264330385253
Option 4 ID : 264330385255
Status : Answered
Chosen Option : 3

Q.21 Parts of the following sentence have been given as options. Select the option that contains an error.

By the way a lorry crashed into the car but the boys were lucky and escaped with only minor injuries.

- Ans 1. the boys were lucky and
 2. escaped with only minor injuries
 3. crashed into the car but
 4. By the way a lorry

Question ID : 26433099125
Option 1 ID : 264330389119
Option 2 ID : 264330389120
Option 3 ID : 264330389118
Option 4 ID : 264330389117
Status : Answered
Chosen Option : 1

Q.22 Select the most appropriate ANTONYM of the underlined word in the following sentence.

One should celebrate every triumph in life.

- Ans
- 1. Victory
 - 2. Defeat
 - 3. Instrument
 - 4. Milestone

Question ID : 264330164308
Option 1 ID : 264330644448
Option 2 ID : 264330644449
Option 3 ID : 264330644450
Option 4 ID : 264330644447
Status : Answered
Chosen Option : 2

Q.23 Select the most appropriate ANTONYM of the underlined word in the given sentence.

It is a misconception that the more you learn, the more likely you are to succeed.

- Ans
- 1. Certainty
 - 2. Fallacy
 - 3. Illusion
 - 4. Hallucination

Question ID : 264330142767
Option 1 ID : 264330559343
Option 2 ID : 264330559346
Option 3 ID : 264330559344
Option 4 ID : 264330559345
Status : Answered
Chosen Option : 1

Q.24 Select the option that expresses the given sentence in indirect speech.

The class teacher told, "Kneel down in the corridor."

- Ans
- 1. The class teacher had ordered to kneel down in the corridor.
 - 2. The class teacher ordered that they should kneel down in the corridor.
 - 3. The class teacher ordered to kneel down in the corridor.
 - 4. The class teacher told that they kneel down in the corridor.

Question ID : 264330167971
Option 1 ID : 264330658781
Option 2 ID : 264330658780
Option 3 ID : 264330658782
Option 4 ID : 264330658779
Status : Answered
Chosen Option : 2

Q.25 Sentences of a paragraph are given below in jumbled order. Arrange the sentences in the correct order to form a meaningful and coherent paragraph.

A. During the period, Europeans were looking for a faster method to reach India by sailing across Africa, and Da Gama succeeded.

B. At that time, gold, spices and other valuables were highly valued in Europe.

C. Vasco da Gama was a Portuguese navigator who sailed from Europe to India.

D. However, they had to travel a vast distance by sea and land to reach them in Asia.

Ans 1. ABCD

2. CBAD

3. CDAB

4. ADCB

Question ID : 26433097524

Option 1 ID : 264330382769

Option 2 ID : 264330382771

Option 3 ID : 264330382772

Option 4 ID : 264330382770

Status : Answered

Chosen Option : 2

Q.26 Select the option that can substitute the underlined word segment with the most appropriate idiom.

Denim jackets are in fashion these days.

Ans 1. in lieu of

2. in vogue

3. in hand

4. in a nut-shell

Question ID : 264330165287

Option 1 ID : 264330648237

Option 2 ID : 264330648238

Option 3 ID : 264330648236

Option 4 ID : 264330648235

Status : Answered

Chosen Option : 3

Q.27 Select the option that changes the form of narration in the following sentence.

My sister asked me, "When will I be allowed to go to the church?"

Ans 1. My sister prayed when she will be allowed to go to the church.

2. My sister asked me that when she would be allowed to go to the church.

3. My sister asked me when she would be allowed to go to the church.

4. My sister asked me when she will be allowed to go to the church.

Question ID : 264330163269

Option 1 ID : 264330640387

Option 2 ID : 264330640390

Option 3 ID : 264330640388

Option 4 ID : 264330640389

Status : Answered

Chosen Option : 3

Q.28 Select the most appropriate option that can substitute the underlined segment in the given sentence. If there is no need to substitute it, select 'No substitution'.
Suitable to the instructions from the higher officials, the government land was allotted to the poor.

- Ans
- 1. Despite of
 - 2. As of
 - 3. In accordance with
 - 4. No substitution

Question ID : 264330132829
Option 1 ID : 264330520403
Option 2 ID : 264330520404
Option 3 ID : 264330520405
Option 4 ID : 264330520406
Status : Answered
Chosen Option : 3

Q.29 The following sentence has been divided into parts. One of them may contain an error. Select the part that contains the error from the given options.
The team played / extremely / good / during the match.

- Ans
- 1. good
 - 2. The team played
 - 3. extremely
 - 4. during the match.

Question ID : 264330164236
Option 1 ID : 264330644177
Option 2 ID : 264330644175
Option 3 ID : 264330644176
Option 4 ID : 264330644178
Status : Answered
Chosen Option : 1

Q.30 Select the option that expresses the given sentence in reported speech.

He said, "I am living in Ludhiana."

- Ans
- 1. He said that he was living in Ludhiana.
 - 2. He asked that he is living in Ludhiana.
 - 3. He said that he is living in Ludhiana.
 - 4. He said that he has been living in Ludhiana.

Question ID : 264330141620
Option 1 ID : 264330554817
Option 2 ID : 264330554816
Option 3 ID : 264330554815
Option 4 ID : 264330554818
Status : Answered
Chosen Option : 1

Q.31 Sentences of a paragraph are given below. While the first and the last sentences (S1 and S6) are in the correct order, the sentences in between are jumbled up. Arrange the sentences in the correct order to form a meaningful and coherent paragraph.
S1. Sania asked Piyush how he had fared in the examination the week before.
A. Piyush then requested Sania not to talk about it.
B. Piyush said that he had done very badly and was afraid that he would not clear the exam.
C. Sania exclaimed that this was his foolish fear.
D. Sania wanted to know the reason for this request.
S6. She knew Piyush was a hard-working boy and would definitely clear the exam.

- Ans
- 1. ABCD
 - 2. ACBD
 - 3. DABC
 - 4. ADBC

Question ID : 264330117460
Option 1 ID : 264330461870
Option 2 ID : 264330461869
Option 3 ID : 264330461871
Option 4 ID : 264330461872
Status : Answered
Chosen Option : 4

Q.32 Select the most appropriate option that can substitute the underlined segment in the given sentence.
The excessive using of pocket calculators can stultify your capacity to do mental calculations.

- Ans
- 1. aversion of pocket calculators
 - 2. utility of pocket calculators
 - 3. used of pocket calculators
 - 4. use of pocket calculators

Question ID : 264330117248
Option 1 ID : 264330461052
Option 2 ID : 264330461050
Option 3 ID : 264330461051
Option 4 ID : 264330461049
Status : Answered
Chosen Option : 4

Q.33 Select the most appropriate option that can substitute the underlined segment in the given sentence.
Unless you don't answer my question , I will not leave.

- Ans
- 1. you don't question my answer
 - 2. you answer my question
 - 3. you don't answer this question
 - 4. I don't answer my question

Question ID : 264330117260
Option 1 ID : 264330461098
Option 2 ID : 264330461099
Option 3 ID : 264330461097
Option 4 ID : 264330461100
Status : Answered
Chosen Option : 2

Q.34 Sentences of a paragraph are given below in jumbled order. Arrange the sentences in the correct order to form a meaningful and coherent paragraph.

- A. Pandit Vidyadhar Bhattacharya was consulted by Sawai Jai Singh II of Jaipur when creating these enormous instruments.
B. The word Jantar Mantar, which in Sanskrit signifies instruments and formulas, has been corrupted.
C. His measurements of the equinoxes' precession and the ecliptic's obliquity are his two most important contributions to astronomy.
D. Samrat Yantra, Ram Yantra, and Jai Prakash were his original creations.

- Ans 1. CDBA
 2. DACB
 3. BADC
 4. ABCD

Question ID : 26433098156
Option 1 ID : 264330385277
Option 2 ID : 264330385278
Option 3 ID : 264330385279
Option 4 ID : 264330385280
Status : Answered
Chosen Option : 3

Q.35 Select the option that expresses the given sentence in passive voice.
They have built a new bridge across the river.

- Ans 1. A new bridge has been building across the river by them.
 2. A new bridge has been built across the river by them.
 3. They have been building a new bridge across the river.
 4. A new bridge will have been built across the river by them.

Question ID : 264330164244
Option 1 ID : 264330644210
Option 2 ID : 264330644207
Option 3 ID : 264330644209
Option 4 ID : 264330644208
Status : Answered
Chosen Option : 2

Q.36 Select the most appropriate ANTONYM of the bracketed word in the following sentence to fill in the blank.

My favourite _____ (deface) of his home is the large, farmhouse-style kitchen.

- Ans 1. fact
 2. dimension
 3. build
 4. regard

Question ID : 264330164223
Option 1 ID : 264330644133
Option 2 ID : 264330644131
Option 3 ID : 264330644134
Option 4 ID : 264330644132
Status : Answered
Chosen Option : 2

Q.37 Select the most appropriate synonym of the given word.

Beneficial

- Ans
- 1. Winsome
 - 2. Strangle
 - 3. Helpful
 - 4. Kernel

Question ID : 264330164272

Option 1 ID : 264330644314

Option 2 ID : 264330644311

Option 3 ID : 264330644313

Option 4 ID : 264330644312

Status : Answered

Chosen Option : 3

Q.38 The following sentence has been split into four segments. Identify the segment that contains a grammatical error.

If you have / faith in God, / everything turn out / to be all right.

- Ans
- 1. If you have
 - 2. to be all right
 - 3. everything turn out
 - 4. faith in God,

Question ID : 26433094140

Option 1 ID : 264330369561

Option 2 ID : 264330369564

Option 3 ID : 264330369563

Option 4 ID : 264330369562

Status : Answered

Chosen Option : 3

Q.39 The following sentence has been split into four segments. Identify the segment that contains a grammatical error.

I'm sure that time / changes things, but it / didn't change anything / unlike my perception of you.

- Ans
- 1. changes things, but it
 - 2. didn't change anything
 - 3. I'm sure that time
 - 4. unlike my perception of you

Question ID : 264330133408

Option 1 ID : 264330522664

Option 2 ID : 264330522665

Option 3 ID : 264330522663

Option 4 ID : 264330522666

Status : Answered

Chosen Option : 2

Q.40 Select the option that expresses the following sentence in passive voice.
I was carrying the Indian flag.

- Ans
- 1. The Indian flag were being carried by me.
 - 2. The Indian flag had being carried by me.
 - 3. The Indian flag is being carried by me.
 - 4. The Indian flag was being carried by me.

Question ID : 264330164344
Option 1 ID : 264330644590
Option 2 ID : 264330644589
Option 3 ID : 264330644588
Option 4 ID : 264330644587
Status : Answered
Chosen Option : 4

Q.41 Select the most appropriate option that can substitute the underlined segment in the given sentence.
Me and Samridhi live here.

- Ans
- 1. Samridhi with I
 - 2. I and Samridhi
 - 3. Samridhi and I
 - 4. Samridhi and me

Question ID : 264330117265
Option 1 ID : 264330461120
Option 2 ID : 264330461117
Option 3 ID : 264330461119
Option 4 ID : 264330461118
Status : Answered
Chosen Option : 3

Q.42 Select the option that expresses the given sentence in reported (or indirect) speech.
Mohan said to Hari, "I will study for the exam."

- Ans
- 1. Mohan told Hari that he would study for the exam.
 - 2. Mohan suggested Hari that he would study for the exam.
 - 3. Mohan said to Hari that he will study for the exam.
 - 4. Mahon would say to Hari that he will study for the exam.

Question ID : 264330164248
Option 1 ID : 264330644225
Option 2 ID : 264330644226
Option 3 ID : 264330644223
Option 4 ID : 264330644224
Status : Answered
Chosen Option : 1

Q.43 Select the most appropriate synonym of the given word.

Explicit

- Ans 1. Oppress
 2. Droopy
 3. Obvious
 4. Harness

Question ID : 264330164271
Option 1 ID : 264330644307
Option 2 ID : 264330644308
Option 3 ID : 264330644310
Option 4 ID : 264330644309
Status : Answered
Chosen Option : 2

Q.44 Select the most appropriate option to fill in the blank.

On 25 August 1925, the Royal Commission on Indian Currency and Finance
_____ the establishment of the Central Bank of India.

- Ans 1. censored
 2. proposed
 3. figured
 4. defined

Question ID : 26433098916
Option 1 ID : 264330388317
Option 2 ID : 264330388319
Option 3 ID : 264330388318
Option 4 ID : 264330388320
Status : Answered
Chosen Option : 1

Q.45 Select the most appropriate option that can substitute the underlined segment in the given sentence.

He was fatiguing because he spent seven break-less hours on the computer.

- Ans 1. was fatigueness because
 2. was fatigued because
 3. was fatigueless because
 4. has been fatiguing because

Question ID : 264330101001
Option 1 ID : 264330396552
Option 2 ID : 264330396550
Option 3 ID : 264330396551
Option 4 ID : 264330396549
Status : Answered
Chosen Option : 2

Q.46 Select the option that expresses the given sentence in direct speech.

The security asked him who he was and which flat he wished to visit.

- Ans
- 1. The security said, "Who are you? Which flat are you wishing to visit?"
 - 2. The security said, "Who are you? Which flat you wished to visit?"
 - 3. The security said, "Who are you? Which flat you wish to be visited?"
 - 4. The security said, "Who are you? Which flat do you wish to visit?"

Question ID : 26433091867
Option 1 ID : 264330360805
Option 2 ID : 264330360808
Option 3 ID : 264330360806
Option 4 ID : 264330360807
Status : Answered
Chosen Option : 4

Q.47 Select the most appropriate idiom that can substitute the underlined segment in the given sentence.

The constant noise from the construction site next door is starting to make me extremely angry.

- Ans
- 1. drive me up the wall
 - 2. bringing me round
 - 3. shove me under the table
 - 4. driving me blind

Question ID : 264330164571
Option 1 ID : 264330645471
Option 2 ID : 264330645472
Option 3 ID : 264330645473
Option 4 ID : 264330645474
Status : Answered
Chosen Option : 2

Q.48 Select the most appropriate meaning of the underlined idiom in the following sentence.

After much of efforts, I could finally hit the nail on the head and succeed.

- Ans
- 1. Complete a task swiftly
 - 2. Speak or act precisely
 - 3. Make an error
 - 4. Accidentally injure oneself

Question ID : 264330168144
Option 1 ID : 264330659454
Option 2 ID : 264330659451
Option 3 ID : 264330659453
Option 4 ID : 264330659452
Status : Answered
Chosen Option : 1

Q.49 Select the most appropriate synonym of the given word.

Apprehension

- Ans 1. Courage
 2. Myth
 3. Fear
 4. Barbarous

Question ID : 264330137010

Option 1 ID : 264330536683

Option 2 ID : 264330536684

Option 3 ID : 264330536685

Option 4 ID : 264330536686

Status : Answered

Chosen Option : 1

Q.50 The following sentence has been split into four segments. Identify the segment that contains a grammatical error.

Salman finishes the work / within hours but he / delays it if not / accompanying by Rohit.

- Ans 1. Salman finishes the work
 2. within hours but he
 3. delays it if not
 4. accompanying by Rohit

Question ID : 26433091956

Option 1 ID : 264330361161

Option 2 ID : 264330361162

Option 3 ID : 264330361163

Option 4 ID : 264330361164

Status : Answered

Chosen Option : 4

Q.51 Select the correct direct narration of the given sentence.
Neeraj said that he would go as soon as it was possible.

- Ans 1. Neeraj says, "I may went as soon as it was possible".
 2. Neeraj say, "I shall went as soon as it is possible".
 3. Neeraj said, "I shall go as soon as it is possible".
 4. Neeraj say, "I should go as soon as it is possible".

Question ID : 264330132881

Option 1 ID : 264330520592

Option 2 ID : 264330520593

Option 3 ID : 264330520594

Option 4 ID : 264330520591

Status : Answered

Chosen Option : 3

Q.52 Select the most appropriate meaning of the given idiom.
Spill the beans

- Ans 1. Reveal a secret
 2. Not that difficult to comprehend
 3. To make fun of someone
 4. Act rudely to someone

Question ID : 264330164174
Option 1 ID : 264330643950
Option 2 ID : 264330643947
Option 3 ID : 264330643949
Option 4 ID : 264330643948
Status : Answered
Chosen Option : 1

Q.53 Select the most appropriate ANTONYM of the given word.
Contentment

- Ans 1. Pleasure
 2. Meanness
 3. Greatness
 4. Sadness

Question ID : 264330168278
Option 1 ID : 264330659981
Option 2 ID : 264330659979
Option 3 ID : 264330659980
Option 4 ID : 264330659982
Status : Answered
Chosen Option : 4

Q.54 Select the most appropriate ANTONYM of the given word.
Brave

- Ans 1. Coward
 2. Adulterous
 3. Moving
 4. Fearless

Question ID : 264330168135
Option 1 ID : 264330659416
Option 2 ID : 264330659417
Option 3 ID : 264330659418
Option 4 ID : 264330659415
Status : Answered
Chosen Option : 1

Q.55 Select the option that expresses the following sentence in passive voice.
The students have presented national level projects to the jury successfully.

- Ans 1. National level projects have been presented by the students to the jury successfully.
2. National level projects had been presented by the students to the jury successfully.
3. National level projects have presented by the students to the jury successfully.
4. National level projects were presented by the students to the jury successfully.

Question ID : 264330164387
Option 1 ID : 264330644761
Option 2 ID : 264330644762
Option 3 ID : 264330644759
Option 4 ID : 264330644760
Status : Answered
Chosen Option : 1

Q.56 Select the grammatically correct sentence.

- A. One of most serious issues with youngsters is an addiction to social media. An issue which needs attention.
- B. One of the most serious issues with youngsters is addiction to social media. An issue which needs attention.
- C. One of the most serious issues with youngsters is an addiction to social media. Issue which needs attention.
- D. One of the most serious issues with youngsters is an addiction to social media. An issue which needs attention.

- Ans 1. C
2. B
3. A
4. D

Question ID : 26433094789
Option 1 ID : 264330371979
Option 2 ID : 264330371978
Option 3 ID : 264330371977
Option 4 ID : 264330371980
Status : Answered
Chosen Option : 4

Q.57 Select the most appropriate meaning of the given idiom.
Under the weather

- Ans 1. Late to reach due to bad weather
2. Raining heavily
3. Surrounded by serious problems of job
4. Minor sickness

Question ID : 264330135900
Option 1 ID : 264330532458
Option 2 ID : 264330532455
Option 3 ID : 264330532456
Option 4 ID : 264330532457
Status : Answered
Chosen Option : 3

Q.58 Select the most appropriate option that can substitute the underlined segment in the given sentence.

A few boys were kept up because of disobedience.

- Ans
- 1. kept off
 - 2. kept on
 - 3. kept in
 - 4. kept back

Question ID : 264330122676

Option 1 ID : 264330480818

Option 2 ID : 264330480815

Option 3 ID : 264330480817

Option 4 ID : 264330480816

Status : Answered

Chosen Option : 1

Q.59 Parts of a paragraph are given below. While the first and the last sentences (S1 and S6) are in the correct order, the parts in between are jumbled up. Arrange the parts in the correct order to form a meaningful and coherent paragraph.

S1. Obesity is a condition where the body accumulates excess fat, leading to a considerable increase in the body weight.

A. This means adverse health effects on the people of our country

B. Such as high blood pressure, high cholesterol, diabetes, heart diseases leading to premature death.

C. It is assuming alarming proportions in our country.

D. To avoid this, lifestyle needs to be changed.

S6. Lack of sports and sedentary lifestyle also contribute to higher obesity level.

- Ans
- 1. ACBD
 - 2. ABDC
 - 3. CBAD
 - 4. CABD

Question ID : 264330117463

Option 1 ID : 264330461882

Option 2 ID : 264330461884

Option 3 ID : 264330461881

Option 4 ID : 264330461883

Status : Answered

Chosen Option : 4

Q.60 Select the most appropriate ANTONYM of the given word.

Virtue

- Ans
- 1. Precise
 - 2. Stout
 - 3. Vice
 - 4. Acquire

Question ID : 264330141098

Option 1 ID : 264330552742

Option 2 ID : 264330552739

Option 3 ID : 264330552741

Option 4 ID : 264330552740

Status : Answered

Chosen Option : 4

Q.61 Identify the ANTONYM of the following word in the given sentence.

Divulge

The culprit surprised everyone by opting to conceal the secret execution of his plans even after getting beaten by the police.

- Ans
- 1. opting
 - 2. execution
 - 3. culprit
 - 4. conceal

Question ID : 264330135898

Option 1 ID : 264330532448

Option 2 ID : 264330532450

Option 3 ID : 264330532447

Option 4 ID : 264330532449

Status : Answered

Chosen Option : 4

Q.62 Select the option that expresses the given sentence in passive voice.

Can you give her a book?

- Ans
- 1. Can she given a book by you?
 - 2. Can she be give a book by you?
 - 3. Can you be given a book by her?
 - 4. Can she be given a book by you?

Question ID : 264330132776

Option 1 ID : 264330520201

Option 2 ID : 264330520199

Option 3 ID : 264330520202

Option 4 ID : 264330520200

Status : Answered

Chosen Option : 4

Q.63 The following sentence has been split into four segments. Identify the segment that contains a grammatical error.

It takes me an hour / to get to work at the moment, / but when the new road is finished, / it be much quicker.

- Ans
- 1. but when the new road is finished
 - 2. it takes me an hour
 - 3. to get to work at the moment
 - 4. It be much quicker

Question ID : 264330120568

Option 1 ID : 264330472515

Option 2 ID : 264330472516

Option 3 ID : 264330472518

Option 4 ID : 264330472517

Status : Answered

Chosen Option : 4

Q.64 Sentences of a paragraph are given below. While the first and the last sentences (S1 and S6) are in the correct order, the sentences in between are jumbled up. Arrange the sentences in the correct order to form a meaningful and coherent paragraph.

S1. One can find ants anywhere on earth.

A. They also use chemicals called pheromones to leave scent.

B. They can communicate effectively with each other.

C. Thus, they are called the earth's most successful species.

D. There are about 2,000 species of ants.

S6. These scent trails help other ants to follow.

Ans 1. CDBA

2. BACD

3. DCBA

4. ABCD

Question ID : 264330117277

Option 1 ID : 264330461167

Option 2 ID : 264330461168

Option 3 ID : 264330461166

Option 4 ID : 264330461165

Status : Answered

Chosen Option : 3

Q.65 Select the option that expresses the given sentence in passive voice.
She promised me a treat.

Ans 1. A treat was promised to me by her.

2. Promise of a treat was given by her to myself.

3. Treats have been promised to me by her.

4. I have been promised treats.

Question ID : 264330134139

Option 1 ID : 264330525581

Option 2 ID : 264330525582

Option 3 ID : 264330525580

Option 4 ID : 264330525579

Status : Answered

Chosen Option : 1

Comprehension:

In the following passage, some words have been deleted. Read the passage carefully and select the most appropriate option to fill in each blank.

The London Eye, formally known as Millennium Wheel, was officially called the British Airways London Eye and then the Merlin Entertainments London Eye. The London Eye, a giant Ferris Wheel, is situated (I)_____ the banks of the River Thames in London, England. Since 20 January 2011, its official name is the EDP Energy London Eye following a three-year sponsorship deal. The (II)_____ structure is 135 m tall and the wheel has a diameter of 120 m or 394 feet. This Ferris Wheel, which is the tallest in Europe, claims to be the most popular paid tourist (III)_____ in the United Kingdom. It is visited by over 3.5 million people annually making it London's most popular tourist attraction for which an admission fee is charged and is sometimes credited with sparking a worldwide revival of Ferris wheel Construction When erected in 1999 it was the tallest Ferris wheel in the world. Until (IV)_____ first by the 160 m Star of Nanchang in 2006 and then the 165 m Singapore Flyer in 2008. (V)_____ by an A-frame on the side only, the Eye is described as 'the world's tallest cantilevered observation wheel'. It provides the highest public viewing point and can be considered as the 20th tallest structure in London.

SubQuestion No : 66

Q.66 Read the given passage carefully and select the appropriate word in the context of the whole passage to fill in the blank.

The London Eye, a giant Ferris Wheel, is situated (I)_____ the banks of the River Thames in London, England.

In the given passage the suitable word for blank (I) is:

- Ans
- 1. with
 - 2. on
 - 3. into
 - 4. for

Question ID : 264330164656

Option 1 ID : 264330645795

Option 2 ID : 264330645796

Option 3 ID : 264330645798

Option 4 ID : 264330645797

Status : Answered

Chosen Option : 2

Comprehension:

In the following passage, some words have been deleted. Read the passage carefully and select the most appropriate option to fill in each blank.

The London Eye, formally known as Millennium Wheel, was officially called the British Airways London Eye and then the Merlin Entertainments London Eye. The London Eye, a giant Ferris Wheel, is situated (I)_____ the banks of the River Thames in London, England. Since 20 January 2011, its official name is the EDP Energy London Eye following a three-year sponsorship deal. The (II)_____ structure is 135 m tall and the wheel has a diameter of 120 m or 394 feet. This Ferris Wheel, which is the tallest in Europe, claims to be the most popular paid tourist (III)_____ in the United Kingdom. It is visited by over 3.5 million people annually making it London's most popular tourist attraction for which an admission fee is charged and is sometimes credited with sparking a worldwide revival of Ferris wheel Construction When erected in 1999 it was the tallest Ferris wheel in the world. Until (IV)_____ first by the 160 m Star of Nanchang in 2006 and then the 165 m Singapore Flyer in 2008. (V)_____ by an A-frame on the side only, the Eye is described as 'the world's tallest cantilevered observation wheel'. It provides the highest public viewing point and can be considered as the 20th tallest structure in London.

SubQuestion No : 67

Q.67 Read the given passage carefully and select the appropriate word in the context of the whole passage to fill in the blank.

The (II)_____ structure is 135 m tall and the wheel has a diameter of 120 m.

In the given passage the suitable word for blank (II) is:

- Ans**
- 1. entire
 - 2. remedial
 - 3. generous
 - 4. deceptive

Question ID : 264330164657

Option 1 ID : 264330645802

Option 2 ID : 264330645800

Option 3 ID : 264330645799

Option 4 ID : 264330645801

Status : Answered

Chosen Option : 1

Comprehension:

In the following passage, some words have been deleted. Read the passage carefully and select the most appropriate option to fill in each blank.

The London Eye, formally known as Millennium Wheel, was officially called the British Airways London Eye and then the Merlin Entertainments London Eye. The London Eye, a giant Ferris Wheel, is situated (I)_____ the banks of the River Thames in London, England. Since 20 January 2011, its official name is the EDP Energy London Eye following a three-year sponsorship deal. The (II)_____ structure is 135 m tall and the wheel has a diameter of 120 m or 394 feet. This Ferris Wheel, which is the tallest in Europe, claims to be the most popular paid tourist (III)_____ in the United Kingdom. It is visited by over 3.5 million people annually making it London's most popular tourist attraction for which an admission fee is charged and is sometimes credited with sparking a worldwide revival of Ferris wheel Construction When erected in 1999 it was the tallest Ferris wheel in the world. Until (IV)_____ first by the 160 m Star of Nanchang in 2006 and then the 165 m Singapore Flyer in 2008. (V)_____ by an A-frame on the side only, the Eye is described as 'the world's tallest cantilevered observation wheel'. It provides the highest public viewing point and can be considered as the 20th tallest structure in London.

SubQuestion No : 68

Q.68 Read the given passage carefully and select the appropriate word in the context of the whole passage to fill in the blank.

This Ferris Wheel, which is the tallest in Europe, claims to be the most popular paid tourist (III)_____ in the United Kingdom.

In the given passage the suitable word for blank (III) is:

- Ans
- 1. agreement
 - 2. attraction
 - 3. emergency
 - 4. juncture

Question ID : 264330164658

Option 1 ID : 264330645804

Option 2 ID : 264330645803

Option 3 ID : 264330645805

Option 4 ID : 264330645806

Status : Answered

Chosen Option : 2

Comprehension:

In the following passage, some words have been deleted. Read the passage carefully and select the most appropriate option to fill in each blank.

The London Eye, formally known as Millennium Wheel, was officially called the British Airways London Eye and then the Merlin Entertainments London Eye. The London Eye, a giant Ferris Wheel, is situated (I) _____ the banks of the River Thames in London, England. Since 20 January 2011, its official name is the EDP Energy London Eye following a three-year sponsorship deal. The (II) _____ structure is 135 m tall and the wheel has a diameter of 120 m or 394 feet. This Ferris Wheel, which is the tallest in Europe, claims to be the most popular paid tourist (III) _____ in the United Kingdom. It is visited by over 3.5 million people annually making it London's most popular tourist attraction for which an admission fee is charged and is sometimes credited with sparking a worldwide revival of Ferris wheel Construction. When erected in 1999 it was the tallest Ferris wheel in the world. Until (IV) _____ first by the 160 m Star of Nanchang in 2006 and then the 165 m Singapore Flyer in 2008. (V) _____ by an A-frame on the side only, the Eye is described as 'the world's tallest cantilevered observation wheel'. It provides the highest public viewing point and can be considered as the 20th tallest structure in London.

SubQuestion No : 69

Q.69 Read the given passage carefully and select the appropriate word in the context of the whole passage to fill in the blank.

It is visited by over 3.5 million people annually. When erected in 1999 it was the tallest Ferris wheel in the world. Until (IV) _____ first by the 160 m Star of Nanchang in 2006 and then the 165 m Singapore Flyer in 2008.

In the given passage the suitable word for blank (IV) is:

Ans ✓ 1. surpassed

✗ 2. disbursed

✗ 3. negotiated

✗ 4. advanced

Question ID : 264330164659

Option 1 ID : 264330645808

Option 2 ID : 264330645810

Option 3 ID : 264330645807

Option 4 ID : 264330645809

Status : Answered

Chosen Option : 4

Comprehension:

In the following passage, some words have been deleted. Read the passage carefully and select the most appropriate option to fill in each blank.

The London Eye, formally known as Millennium Wheel, was officially called the British Airways London Eye and then the Merlin Entertainments London Eye. The London Eye, a giant Ferris Wheel, is situated (I)_____ the banks of the River Thames in London, England. Since 20 January 2011, its official name is the EDP Energy London Eye following a three-year sponsorship deal. The (II)_____ structure is 135 m tall and the wheel has a diameter of 120 m or 394 feet. This Ferris Wheel, which is the tallest in Europe, claims to be the most popular paid tourist (III)_____ in the United Kingdom. It is visited by over 3.5 million people annually making it London's most popular tourist attraction for which an admission fee is charged and is sometimes credited with sparking a worldwide revival of Ferris wheel Construction. When erected in 1999 it was the tallest Ferris wheel in the world. Until (IV)_____ first by the 160 m Star of Nanchang in 2006 and then the 165 m Singapore Flyer in 2008. (V)_____ by an A-frame on the side only, the Eye is described as 'the world's tallest cantilevered observation wheel'. It provides the highest public viewing point and can be considered as the 20th tallest structure in London.

SubQuestion No : 70

Q.70 Read the given passage carefully and select the appropriate word in the context of the whole passage to fill in the blank.

(V)_____ by an A-frame on the side only, the Eye is described as 'the world's tallest cantilevered observation wheel'.

In the given passage the suitable word for blank (V) is:

- Ans**
- 1. Supported
 - 2. Consumed
 - 3. Credited
 - 4. Required

Question ID : 264330164660

Option 1 ID : 264330645811

Option 2 ID : 264330645813

Option 3 ID : 264330645812

Option 4 ID : 264330645814

Status : Answered

Chosen Option : 1

Comprehension:

In the following passage, some words have been deleted. Read the passage carefully and select the most appropriate option to fill in each blank.

Global warming is a significant (1)_____ issue that requires immediate attention. The (2)_____ of greenhouse gases in the atmosphere has led to a (3)_____ increase in average temperatures worldwide. This phenomenon (4)_____ various adverse effects on the environment, including (5)_____ weather patterns and rising sea levels.

SubQuestion No : 71

Q.71 Select the most appropriate option to fill in blank number 1.

- Ans**
- 1. detrimental
 - 2. environmental
 - 3. controversial
 - 4. beneficial

Question ID : 264330164678

Option 1 ID : 264330645880

Option 2 ID : 264330645879

Option 3 ID : 264330645881

Option 4 ID : 264330645882

Status : Answered

Chosen Option : 2

Comprehension:

In the following passage, some words have been deleted. Read the passage carefully and select the most appropriate option to fill in each blank.

Global warming is a significant (1)_____ issue that requires immediate attention. The (2)_____ of greenhouse gases in the atmosphere has led to a (3)_____ increase in average temperatures worldwide. This phenomenon (4)_____ various adverse effects on the environment, including (5)_____ weather patterns and rising sea levels.

SubQuestion No : 72

Q.72 Select the most appropriate option to fill in blank number 2.

- Ans 1. production
 2. emission
 3. reduction
 4. extraction

Question ID : 264330164679

Option 1 ID : 264330645886

Option 2 ID : 264330645883

Option 3 ID : 264330645884

Option 4 ID : 264330645885

Status : Answered

Chosen Option : 1

Comprehension:

In the following passage, some words have been deleted. Read the passage carefully and select the most appropriate option to fill in each blank.

Global warming is a significant (1)_____ issue that requires immediate attention. The (2)_____ of greenhouse gases in the atmosphere has led to a (3)_____ increase in average temperatures worldwide. This phenomenon (4)_____ various adverse effects on the environment, including (5)_____ weather patterns and rising sea levels.

SubQuestion No : 73

Q.73 Select the most appropriate option to fill in blank number 3.

- Ans 1. large
 2. ineffective
 3. gradual
 4. temporary

Question ID : 264330164680

Option 1 ID : 264330645890

Option 2 ID : 264330645889

Option 3 ID : 264330645887

Option 4 ID : 264330645888

Status : Answered

Chosen Option : 3

Comprehension:

In the following passage, some words have been deleted. Read the passage carefully and select the most appropriate option to fill in each blank.

Global warming is a significant (1)_____ issue that requires immediate attention. The (2)_____ of greenhouse gases in the atmosphere has led to a (3)_____ increase in average temperatures worldwide. This phenomenon (4)_____ various adverse effects on the environment, including (5)_____ weather patterns and rising sea levels.

SubQuestion No : 74

Q.74 Select the most appropriate option to fill in blank number 4.

- Ans 1. contributes
 2. causes
 3. prevents
 4. results

Question ID : 264330164681

Option 1 ID : 264330645893

Option 2 ID : 264330645892

Option 3 ID : 264330645894

Option 4 ID : 264330645891

Status : Answered

Chosen Option : 2

Comprehension:

In the following passage, some words have been deleted. Read the passage carefully and select the most appropriate option to fill in each blank.

Global warming is a significant (1)_____ issue that requires immediate attention. The (2)_____ of greenhouse gases in the atmosphere has led to a (3)_____ increase in average temperatures worldwide. This phenomenon (4)_____ various adverse effects on the environment, including (5)_____ weather patterns and rising sea levels.

SubQuestion No : 75

Q.75 Select the most appropriate option to fill in blank number 5.

- Ans 1. stable
 2. erratic
 3. constant
 4. predictable

Question ID : 264330164682

Option 1 ID : 264330645895

Option 2 ID : 264330645897

Option 3 ID : 264330645896

Option 4 ID : 264330645898

Status : Answered

Chosen Option : 3

Comprehension:

In the following passage, some words have been deleted. Read the passage carefully and select the most appropriate option to fill in each blank.

Necessity is an (1)_____ force that compels a man to do things. It stirs the mind so (2)_____ that it causes great unrest that continues until the necessity is (3) _____. As order comes out of (4) _____ chaos so does an invention out of some (5) _____.

SubQuestion No : 76**Q.76** Select the most appropriate option to fill in blank No. 1.

- Ans 1. inconceivable
 2. irresistible
 3. essential
 4. unpredictable

Question ID : 264330166468

Option 1 ID : 264330652915

Option 2 ID : 264330652916

Option 3 ID : 264330652918

Option 4 ID : 264330652917

Status : Answered

Chosen Option : 3

Comprehension:

In the following passage, some words have been deleted. Read the passage carefully and select the most appropriate option to fill in each blank.

Necessity is an (1)_____ force that compels a man to do things. It stirs the mind so (2)_____ that it causes great unrest that continues until the necessity is (3) _____. As order comes out of (4) _____ chaos so does an invention out of some (5) _____.

SubQuestion No : 77**Q.77** Select the most appropriate option to fill in blank No. 2.

- Ans 1. slowly
 2. gracefully
 3. massively
 4. violently

Question ID : 264330166469

Option 1 ID : 264330652921

Option 2 ID : 264330652919

Option 3 ID : 264330652922

Option 4 ID : 264330652920

Status : Answered

Chosen Option : 2

Comprehension:

In the following passage, some words have been deleted. Read the passage carefully and select the most appropriate option to fill in each blank.

Necessity is an (1)_____ force that compels a man to do things. It stirs the mind so (2) _____ that it causes great unrest that continues until the necessity is (3) _____. As order comes out of (4) _____ chaos so does an invention out of some (5) _____.

SubQuestion No : 78**Q.78 Select the most appropriate option to fill in blank No. 3.**

- Ans 1. perturbed
 2. concerned
 3. fulfilled
 4. committed

Question ID : 264330166470

Option 1 ID : 264330652924

Option 2 ID : 264330652926

Option 3 ID : 264330652923

Option 4 ID : 264330652925

Status : Answered

Chosen Option : 3

Comprehension:

In the following passage, some words have been deleted. Read the passage carefully and select the most appropriate option to fill in each blank.

Necessity is an (1)_____ force that compels a man to do things. It stirs the mind so (2) _____ that it causes great unrest that continues until the necessity is (3) _____. As order comes out of (4) _____ chaos so does an invention out of some (5) _____.

SubQuestion No : 79**Q.79 Select the most appropriate option to fill in blank No. 4.**

- Ans 1. analytical
 2. least
 3. perfect
 4. utter

Question ID : 264330166471

Option 1 ID : 264330652930

Option 2 ID : 264330652928

Option 3 ID : 264330652929

Option 4 ID : 264330652927

Status : Answered

Chosen Option : 3

Comprehension:

In the following passage, some words have been deleted. Read the passage carefully and select the most appropriate option to fill in each blank.

Necessity is an (1) _____ force that compels a man to do things. It stirs the mind so (2) _____ that it causes great unrest that continues until the necessity is (3) _____. As order comes out of (4) _____ chaos so does an invention out of some (5) _____.

SubQuestion No : 80**Q.80** Select the most appropriate option to fill in blank No. 5.

- Ans 1. necessity
 2. abstrusity
 3. ability
 4. amity

Question ID : 264330166472

Option 1 ID : 264330652933

Option 2 ID : 264330652932

Option 3 ID : 264330652931

Option 4 ID : 264330652934

Status : Answered

Chosen Option : 1

Comprehension:

In the following passage some words have been deleted. Read the passage carefully and select the most appropriate option to fill in each blank.

Fire is a significant factor in human (1) _____. The Stone Age man was the first to discover and use fire, which provided him (2) _____ and a means to cook food. Initially, he produced fire by rubbing two stones, and the (3) _____ between two stones generated fire. But this process was very (4) _____ and he wanted to discover a less laborious way of producing fire. For this he had to first preserve the fire. He discovered a fire band and carried it everywhere. This discovery led to the invention of torches and lamps that could be used for (5) _____, and preserving flame. So, we can say that fire is an accidental invention.

SubQuestion No : 81**Q.81** Select the most appropriate option to fill in blank number 1.

- Ans 1. rotation
 2. evolution
 3. recession
 4. regression

Question ID : 264330168070

Option 1 ID : 264330659162

Option 2 ID : 264330659160

Option 3 ID : 264330659161

Option 4 ID : 264330659159

Status : Answered

Chosen Option : 2

Comprehension:

In the following passage some words have been deleted. Read the passage carefully and select the most appropriate option to fill in each blank.

Fire is a significant factor in human (1)_____. The Stone Age man was the first to discover and use fire, which provided him (2)_____ and a means to cook food. Initially, he produced fire by rubbing two stones, and the (3)_____ between two stones generated fire. But this process was very (4)_____ and he wanted to discover a less laborious way of producing fire. For this he had to first preserve the fire. He discovered a fire band and carried it everywhere. This discovery led to the invention of torches and lamps that could be used for (5)_____, and preserving flame. So, we can say that fire is an accidental invention.

SubQuestion No : 82**Q.82 Select the most appropriate option to fill in blank number 2.**

- Ans 1. coldness
 2. hot
 3. warmth
 4. warm

Question ID : 264330168071

Option 1 ID : 264330659166

Option 2 ID : 264330659165

Option 3 ID : 264330659163

Option 4 ID : 264330659164

Status : Answered

Chosen Option : 2

Comprehension:

In the following passage some words have been deleted. Read the passage carefully and select the most appropriate option to fill in each blank.

Fire is a significant factor in human (1)_____. The Stone Age man was the first to discover and use fire, which provided him (2)_____ and a means to cook food. Initially, he produced fire by rubbing two stones, and the (3)_____ between two stones generated fire. But this process was very (4)_____ and he wanted to discover a less laborious way of producing fire. For this he had to first preserve the fire. He discovered a fire band and carried it everywhere. This discovery led to the invention of torches and lamps that could be used for (5)_____, and preserving flame. So, we can say that fire is an accidental invention.

SubQuestion No : 83**Q.83 Select the most appropriate option to fill in blank number 3.**

- Ans 1. retraction
 2. cohesion
 3. smoothness
 4. friction

Question ID : 264330168072

Option 1 ID : 264330659167

Option 2 ID : 264330659168

Option 3 ID : 264330659169

Option 4 ID : 264330659170

Status : Answered

Chosen Option : 1

Comprehension:

In the following passage some words have been deleted. Read the passage carefully and select the most appropriate option to fill in each blank.

Fire is a significant factor in human (1)_____. The Stone Age man was the first to discover and use fire, which provided him (2)_____ and a means to cook food. Initially, he produced fire by rubbing two stones, and the (3)_____ between two stones generated fire. But this process was very (4)_____ and he wanted to discover a less laborious way of producing fire. For this he had to first preserve the fire. He discovered a fire band and carried it everywhere. This discovery led to the invention of torches and lamps that could be used for (5)_____, and preserving flame. So, we can say that fire is an accidental invention.

SubQuestion No : 84

Q.84 Select the most appropriate option to fill in blank number 4.

- Ans**
- 1. uncontainable
 - 2. cumbersome
 - 3. manageable
 - 4. controllable

Question ID : 264330168073

Option 1 ID : 264330659174

Option 2 ID : 264330659171

Option 3 ID : 264330659172

Option 4 ID : 264330659173

Status : Answered

Chosen Option : 2

Comprehension:

In the following passage some words have been deleted. Read the passage carefully and select the most appropriate option to fill in each blank.

Fire is a significant factor in human (1)_____. The Stone Age man was the first to discover and use fire, which provided him (2)_____ and a means to cook food. Initially, he produced fire by rubbing two stones, and the (3)_____ between two stones generated fire. But this process was very (4)_____ and he wanted to discover a less laborious way of producing fire. For this he had to first preserve the fire. He discovered a fire band and carried it everywhere. This discovery led to the invention of torches and lamps that could be used for (5)_____, and preserving flame. So, we can say that fire is an accidental invention.

SubQuestion No : 85

Q.85 Select the most appropriate option to fill in blank number 5.

- Ans**
- 1. illumination
 - 2. dullness
 - 3. confusion
 - 4. darkness

Question ID : 264330168074

Option 1 ID : 264330659176

Option 2 ID : 264330659178

Option 3 ID : 264330659175

Option 4 ID : 264330659177

Status : Answered

Chosen Option : 4

Comprehension:

Read the given passage and answer the questions that follow.

In a study, the University of Colorado in Denver observed a group of nurses who visited pregnant mothers. After the women gave birth, the nurses made approximately twenty visits before the children turned two years old. When the benefits to the children were studied, the researchers found that the children were emotionally less vulnerable to fear. The children learned languages sooner. They also had higher mental development scores than the control group without the nurses' support. The benefits to the children because of this simple intervention of the nurses' support were observed even fifteen years later.

SubQuestion No : 86

Q.86 What is the most suitable title of the passage?

- Ans 1. Pregnant Mothers and Nurses
 2. Control Group and Nurses
 3. Social Support and its Benefits
 4. Intervention of the Nurses

Question ID : 264330167932

Option 1 ID : 264330658631

Option 2 ID : 264330658634

Option 3 ID : 264330658633

Option 4 ID : 264330658632

Status : Answered

Chosen Option : 4

Comprehension:

Read the given passage and answer the questions that follow.

In a study, the University of Colorado in Denver observed a group of nurses who visited pregnant mothers. After the women gave birth, the nurses made approximately twenty visits before the children turned two years old. When the benefits to the children were studied, the researchers found that the children were emotionally less vulnerable to fear. The children learned languages sooner. They also had higher mental development scores than the control group without the nurses' support. The benefits to the children because of this simple intervention of the nurses' support were observed even fifteen years later.

SubQuestion No : 87

Q.87 What is the style of the passage?

- Ans 1. Descriptive
 2. Expository
 3. Narrative
 4. Classification

Question ID : 264330167934

Option 1 ID : 264330658640

Option 2 ID : 264330658642

Option 3 ID : 264330658639

Option 4 ID : 264330658641

Status : Answered

Chosen Option : 1

Comprehension:

Read the given passage and answer the questions that follow.

In a study, the University of Colorado in Denver observed a group of nurses who visited pregnant mothers. After the women gave birth, the nurses made approximately twenty visits before the children turned two years old. When the benefits to the children were studied, the researchers found that the children were emotionally less vulnerable to fear. The children learned languages sooner. They also had higher mental development scores than the control group without the nurses' support. The benefits to the children because of this simple intervention of the nurses' support were observed even fifteen years later.

SubQuestion No : 88

Q.88 Select the most appropriate ANTONYM of the given word.

Unsusceptible

- Ans** ✓ 1. Vulnerable
✗ 2. Intervention
✗ 3. Development
✗ 4. Approximately

Question ID : 264330167935

Option 1 ID : 264330658644

Option 2 ID : 264330658646

Option 3 ID : 264330658645

Option 4 ID : 264330658643

Status : Answered

Chosen Option : 3

Comprehension:

Read the given passage and answer the questions that follow.

In a study, the University of Colorado in Denver observed a group of nurses who visited pregnant mothers. After the women gave birth, the nurses made approximately twenty visits before the children turned two years old. When the benefits to the children were studied, the researchers found that the children were emotionally less vulnerable to fear. The children learned languages sooner. They also had higher mental development scores than the control group without the nurses' support. The benefits to the children because of this simple intervention of the nurses' support were observed even fifteen years later.

SubQuestion No : 89

Q.89 What can one infer from the passage?

- Ans** ✓ 1. The community plays an important role in offering social support to mothers.
✗ 2. Nurses' intervention reduce vulnerability to fear in pregnant mothers.
✗ 3. Some children learn languages quickly.
✗ 4. Control group without nurses' support have relatively elevated mental development.

Question ID : 264330167936

Option 1 ID : 264330658648

Option 2 ID : 264330658650

Option 3 ID : 264330658647

Option 4 ID : 264330658649

Status : Answered

Chosen Option : 2

Comprehension:

Read the given passage and answer the questions that follow.

In a study, the University of Colorado in Denver observed a group of nurses who visited pregnant mothers. After the women gave birth, the nurses made approximately twenty visits before the children turned two years old. When the benefits to the children were studied, the researchers found that the children were emotionally less vulnerable to fear. The children learned languages sooner. They also had higher mental development scores than the control group without the nurses' support. The benefits to the children because of this simple intervention of the nurses' support were observed even fifteen years later.

SubQuestion No : 90

Q.90 Which statement best summarises the passage?

- Ans**
- 1. Pregnant women are emotionally less vulnerable to fear.
 - 2. Nurses should visit pregnant mothers regularly.
 - 3. Study on nurses have impact even after fifteen years.
 - 4. Community support is vital in the emotional development of a child.

Question ID : 264330167933

Option 1 ID : 264330658637

Option 2 ID : 264330658635

Option 3 ID : 264330658638

Option 4 ID : 264330658636

Status : Answered

Chosen Option : 4

Comprehension:

Read the given passage and answer the question that follows.

Sustainable utensils are proving to be a crucial tool in our collective efforts towards building a greener and more environmentally conscious world. These utensils, often made from renewable resources such as bamboo or plant-based materials like cornstarch, offer a myriad of benefits. Firstly, sustainable utensils significantly reduce our reliance on single-use plastics. Plastic cutlery, traditionally used for convenience, contributes to the vast amounts of waste that end up in landfills and oceans, polluting ecosystems and harming marine life. By switching to sustainable alternatives, we can minimise this environmental damage. Secondly, sustainable utensils are biodegradable or compostable, meaning they can break down naturally over time. This ensures that even if they do end up in landfills, they won't persist for centuries like plastic does. Instead, they return to the Earth without leaving a lasting negative impact. These utensils can be reused multiple times, further reducing waste. Many sustainable options are durable and washable, making them a viable long-term solution.

SubQuestion No : 91

Q.91 Which materials are commonly used to make sustainable utensils?

- Ans**
- 1. Plastic and aluminium
 - 2. Ceramic and wood
 - 3. Bamboo and cornstarch
 - 4. Metal and glass

Question ID : 264330169891

Option 1 ID : 264330666242

Option 2 ID : 264330666240

Option 3 ID : 264330666241

Option 4 ID : 264330666239

Status : Answered

Chosen Option : 3

Comprehension:

Read the given passage and answer the question that follows.

Sustainable utensils are proving to be a crucial tool in our collective efforts towards building a greener and more environmentally conscious world. These utensils, often made from renewable resources such as bamboo or plant-based materials like cornstarch, offer a myriad of benefits. Firstly, sustainable utensils significantly reduce our reliance on single-use plastics. Plastic cutlery, traditionally used for convenience, contributes to the vast amounts of waste that end up in landfills and oceans, polluting ecosystems and harming marine life. By switching to sustainable alternatives, we can minimise this environmental damage. Secondly, sustainable utensils are biodegradable or compostable, meaning they can break down naturally over time. This ensures that even if they do end up in landfills, they won't persist for centuries like plastic does. Instead, they return to the Earth without leaving a lasting negative impact. These utensils can be reused multiple times, further reducing waste. Many sustainable options are durable and washable, making them a viable long-term solution.

SubQuestion No : 92

Q.92 What is the main focus of the passage?

- Ans** 1. The benefits and harms of single-use plastic
2. The environmental benefits of the sustainable utensils
3. The importance of sustainable alternatives
4. The economic benefits of sustainable utensils

Question ID : 264330169890

Option 1 ID : 264330666238

Option 2 ID : 264330666236

Option 3 ID : 264330666235

Option 4 ID : 264330666237

Status : Answered

Chosen Option : 2

Comprehension:

Read the given passage and answer the question that follows.

Sustainable utensils are proving to be a crucial tool in our collective efforts towards building a greener and more environmentally conscious world. These utensils, often made from renewable resources such as bamboo or plant-based materials like cornstarch, offer a myriad of benefits. Firstly, sustainable utensils significantly reduce our reliance on single-use plastics. Plastic cutlery, traditionally used for convenience, contributes to the vast amounts of waste that end up in landfills and oceans, polluting ecosystems and harming marine life. By switching to sustainable alternatives, we can minimise this environmental damage. Secondly, sustainable utensils are biodegradable or compostable, meaning they can break down naturally over time. This ensures that even if they do end up in landfills, they won't persist for centuries like plastic does. Instead, they return to the Earth without leaving a lasting negative impact. These utensils can be reused multiple times, further reducing waste. Many sustainable options are durable and washable, making them a viable long-term solution.

SubQuestion No : 93

Q.93 What distinguishes sustainable utensils from plastic cutlery?

- Ans** 1. They are made from non-renewable resources
2. They are more expensive
3. They have a shorter lifespan
4. They have a lower environmental impact

Question ID : 264330169892

Option 1 ID : 264330666244

Option 2 ID : 264330666243

Option 3 ID : 264330666245

Option 4 ID : 264330666246

Status : Answered

Chosen Option : 1

Comprehension:

Read the given passage and answer the question that follows.

Sustainable utensils are proving to be a crucial tool in our collective efforts towards building a greener and more environmentally conscious world. These utensils, often made from renewable resources such as bamboo or plant-based materials like cornstarch, offer a myriad of benefits. Firstly, sustainable utensils significantly reduce our reliance on single-use plastics. Plastic cutlery, traditionally used for convenience, contributes to the vast amounts of waste that end up in landfills and oceans, polluting ecosystems and harming marine life. By switching to sustainable alternatives, we can minimise this environmental damage. Secondly, sustainable utensils are biodegradable or compostable, meaning they can break down naturally over time. This ensures that even if they do end up in landfills, they won't persist for centuries like plastic does. Instead, they return to the Earth without leaving a lasting negative impact. These utensils can be reused multiple times, further reducing waste. Many sustainable options are durable and washable, making them a viable long-term solution.

SubQuestion No : 94

Q.94 Which of the following is NOT a characteristic of sustainable utensils?

- Ans
- 1. Reusability
 - 2. Biodegradability
 - 3. Durability
 - 4. Non-recyclability

Question ID : 264330169893

Option 1 ID : 264330666250

Option 2 ID : 264330666247

Option 3 ID : 264330666249

Option 4 ID : 264330666248

Status : Answered

Chosen Option : 4

Comprehension:

Read the given passage and answer the question that follows.

Sustainable utensils are proving to be a crucial tool in our collective efforts towards building a greener and more environmentally conscious world. These utensils, often made from renewable resources such as bamboo or plant-based materials like cornstarch, offer a myriad of benefits. Firstly, sustainable utensils significantly reduce our reliance on single-use plastics. Plastic cutlery, traditionally used for convenience, contributes to the vast amounts of waste that end up in landfills and oceans, polluting ecosystems and harming marine life. By switching to sustainable alternatives, we can minimise this environmental damage. Secondly, sustainable utensils are biodegradable or compostable, meaning they can break down naturally over time. This ensures that even if they do end up in landfills, they won't persist for centuries like plastic does. Instead, they return to the Earth without leaving a lasting negative impact. These utensils can be reused multiple times, further reducing waste. Many sustainable options are durable and washable, making them a viable long-term solution.

SubQuestion No : 95

Q.95 Based on the information provided in the passage, which among the following is NOT an example of sustainable utensil?

- Ans
- 1. Wooden cutlery
 - 2. Edible cutlery
 - 3. Bioplastic cutlery
 - 4. Plastic cutlery

Question ID : 264330169894

Option 1 ID : 264330666251

Option 2 ID : 264330666253

Option 3 ID : 264330666252

Option 4 ID : 264330666254

Status : Answered

Chosen Option : 4

Comprehension:

Read the given passage and answer the questions that follow.

Cybercrime refers to any illegal activity that involves the use of technology or computer networks. As technology continues to advance and more people depend on it for their daily lives, the threat of cybercrime becomes more prevalent. Cybercriminals can carry out various types of attacks, including hacking, phishing, ransomware attacks and identity theft.

One of the most common forms of cybercrime is hacking, where a cybercriminal gains unauthorised access to a computer system or network. This type of attack can be particularly devastating, as it can give the hacker access to sensitive information such as financial data, personal information or intellectual property. Cybercriminals can also use malware to infiltrate systems, steal information or cause damage to the network.

Phishing is another common form of cybercrime that involves tricking people into providing personal information or login credentials. Cybercriminals will often create fake websites or emails that look legitimate to convince users to give up their information. These attacks can be very effective because they often target people's trust in legitimate businesses or institutions.

Ransomware attacks have become increasingly prevalent in recent years, where cybercriminals use malware to lock a victim's computer or files until a ransom is paid. This type of attack can be particularly damaging for businesses, as it can result in lost revenue, damage to reputation and a disruption in operations.

Identity theft is another major form of cybercrime, where cybercriminals steal someone's personal information to access financial accounts, apply for credit or commit other crimes in their name. This can be particularly damaging for individuals, as it can take months or even years to fully recover from the damage.

Cybercrime is a global problem that affects individuals, businesses and governments alike. It can cause significant financial losses, damage to reputation and disruptions to daily life. To combat cybercrime, individuals and organisations must take proactive measures to protect themselves, including using strong passwords, keeping software up to date and being cautious when opening emails or clicking links.

Governments and law enforcement agencies also have a role to play in combatting cybercrime. They can work to strengthen cybersecurity laws, increase funding for cybersecurity initiatives and collaborate with international partners to investigate and prosecute cybercriminals.

Overall, cybercrime is a complex and ever-evolving problem requiring a multi-faceted approach. By taking proactive measures and working together, we can reduce the threat of cybercrime and protect ourselves and our communities from its damaging effects.

SubQuestion No : 96

Q.96 Which of the following best describes the tone of the passage?

- Ans**
- 1. Confrontational
 - 2. Informative
 - 3. Humorous
 - 4. Sarcastic

Question ID : 264330166401

Option 1 ID : 264330652653

Option 2 ID : 264330652651

Option 3 ID : 264330652654

Option 4 ID : 264330652652

Status : Answered

Chosen Option : 2

Comprehension:

Read the given passage and answer the questions that follow.

Cybercrime refers to any illegal activity that involves the use of technology or computer networks. As technology continues to advance and more people depend on it for their daily lives, the threat of cybercrime becomes more prevalent. Cybercriminals can carry out various types of attacks, including hacking, phishing, ransomware attacks and identity theft.

One of the most common forms of cybercrime is hacking, where a cybercriminal gains unauthorised access to a computer system or network. This type of attack can be particularly devastating, as it can give the hacker access to sensitive information such as financial data, personal information or intellectual property. Cybercriminals can also use malware to infiltrate systems, steal information or cause damage to the network.

Phishing is another common form of cybercrime that involves tricking people into providing personal information or login credentials. Cybercriminals will often create fake websites or emails that look legitimate to convince users to give up their information. These attacks can be very effective because they often target people's trust in legitimate businesses or institutions.

Ransomware attacks have become increasingly prevalent in recent years, where cybercriminals use malware to lock a victim's computer or files until a ransom is paid. This type of attack can be particularly damaging for businesses, as it can result in lost revenue, damage to reputation and a disruption in operations.

Identity theft is another major form of cybercrime, where cybercriminals steal someone's personal information to access financial accounts, apply for credit or commit other crimes in their name. This can be particularly damaging for individuals, as it can take months or even years to fully recover from the damage.

Cybercrime is a global problem that affects individuals, businesses and governments alike. It can cause significant financial losses, damage to reputation and disruptions to daily life. To combat cybercrime, individuals and organisations must take proactive measures to protect themselves, including using strong passwords, keeping software up to date and being cautious when opening emails or clicking links.

Governments and law enforcement agencies also have a role to play in combatting cybercrime. They can work to strengthen cybersecurity laws, increase funding for cybersecurity initiatives and collaborate with international partners to investigate and prosecute cybercriminals.

Overall, cybercrime is a complex and ever-evolving problem requiring a multi-faceted approach. By taking proactive measures and working together, we can reduce the threat of cybercrime and protect ourselves and our communities from its damaging effects.

SubQuestion No : 97**Q.97 What is phishing ?**

- Ans**
- 1. Phishing involves hacking into a computer system and stealing sensitive information.
 - 2. Phishing is a type of malware that locks a victim's computer or files until a ransom is paid.
 - 3. Phishing involves tricking people into providing personal information or login credentials.
 - 4. Phishing is a type of identity theft where cybercriminals steal someone's personal information to access financial accounts.

Question ID : 264330166402

Option 1 ID : 264330652655

Option 2 ID : 264330652656

Option 3 ID : 264330652657

Option 4 ID : 264330652658

Status : Answered

Chosen Option : 3

Comprehension:

Read the given passage and answer the questions that follow.

Cybercrime refers to any illegal activity that involves the use of technology or computer networks. As technology continues to advance and more people depend on it for their daily lives, the threat of cybercrime becomes more prevalent. Cybercriminals can carry out various types of attacks, including hacking, phishing, ransomware attacks and identity theft.

One of the most common forms of cybercrime is hacking, where a cybercriminal gains unauthorised access to a computer system or network. This type of attack can be particularly devastating, as it can give the hacker access to sensitive information such as financial data, personal information or intellectual property. Cybercriminals can also use malware to infiltrate systems, steal information or cause damage to the network.

Phishing is another common form of cybercrime that involves tricking people into providing personal information or login credentials. Cybercriminals will often create fake websites or emails that look legitimate to convince users to give up their information. These attacks can be very effective because they often target people's trust in legitimate businesses or institutions.

Ransomware attacks have become increasingly prevalent in recent years, where cybercriminals use malware to lock a victim's computer or files until a ransom is paid. This type of attack can be particularly damaging for businesses, as it can result in lost revenue, damage to reputation and a disruption in operations.

Identity theft is another major form of cybercrime, where cybercriminals steal someone's personal information to access financial accounts, apply for credit or commit other crimes in their name. This can be particularly damaging for individuals, as it can take months or even years to fully recover from the damage.

Cybercrime is a global problem that affects individuals, businesses and governments alike. It can cause significant financial losses, damage to reputation and disruptions to daily life. To combat cybercrime, individuals and organisations must take proactive measures to protect themselves, including using strong passwords, keeping software up to date and being cautious when opening emails or clicking links.

Governments and law enforcement agencies also have a role to play in combatting cybercrime. They can work to strengthen cybersecurity laws, increase funding for cybersecurity initiatives and collaborate with international partners to investigate and prosecute cybercriminals.

Overall, cybercrime is a complex and ever-evolving problem requiring a multi-faceted approach. By taking proactive measures and working together, we can reduce the threat of cybercrime and protect ourselves and our communities from its damaging effects.

SubQuestion No : 98

Q.98 Which of the following are facts given in the passage?

- Ans**
- 1. Identity theft cannot result in significant financial losses.
 - 2. Cybercrime only affects individuals and not businesses.
 - 3. Hacking is a type of cybercrime that can give hackers access to sensitive information.
 - 4. Phishing is a type of cybercrime that involves locking a victim's computer or files until a ransom is paid.

Question ID : 264330166399

Option 1 ID : 264330652646

Option 2 ID : 264330652643

Option 3 ID : 264330652644

Option 4 ID : 264330652645

Status : Answered

Chosen Option : 3

Comprehension:

Read the given passage and answer the questions that follow.

Cybercrime refers to any illegal activity that involves the use of technology or computer networks. As technology continues to advance and more people depend on it for their daily lives, the threat of cybercrime becomes more prevalent. Cybercriminals can carry out various types of attacks, including hacking, phishing, ransomware attacks and identity theft.

One of the most common forms of cybercrime is hacking, where a cybercriminal gains unauthorised access to a computer system or network. This type of attack can be particularly devastating, as it can give the hacker access to sensitive information such as financial data, personal information or intellectual property. Cybercriminals can also use malware to infiltrate systems, steal information or cause damage to the network.

Phishing is another common form of cybercrime that involves tricking people into providing personal information or login credentials. Cybercriminals will often create fake websites or emails that look legitimate to convince users to give up their information. These attacks can be very effective because they often target people's trust in legitimate businesses or institutions.

Ransomware attacks have become increasingly prevalent in recent years, where cybercriminals use malware to lock a victim's computer or files until a ransom is paid. This type of attack can be particularly damaging for businesses, as it can result in lost revenue, damage to reputation and a disruption in operations.

Identity theft is another major form of cybercrime, where cybercriminals steal someone's personal information to access financial accounts, apply for credit or commit other crimes in their name. This can be particularly damaging for individuals, as it can take months or even years to fully recover from the damage.

Cybercrime is a global problem that affects individuals, businesses and governments alike. It can cause significant financial losses, damage to reputation and disruptions to daily life. To combat cybercrime, individuals and organisations must take proactive measures to protect themselves, including using strong passwords, keeping software up to date and being cautious when opening emails or clicking links.

Governments and law enforcement agencies also have a role to play in combatting cybercrime. They can work to strengthen cybersecurity laws, increase funding for cybersecurity initiatives and collaborate with international partners to investigate and prosecute cybercriminals.

Overall, cybercrime is a complex and ever-evolving problem requiring a multi-faceted approach. By taking proactive measures and working together, we can reduce the threat of cybercrime and protect ourselves and our communities from its damaging effects.

SubQuestion No : 99

Q.99 Which of the following can be inferred from the passage?

- Ans**
- 1. Cybercriminals use phishing attacks to gain access to financial information.
 - 2. Ransomware attacks are the most common form of cybercrime.
 - 3. Cybersecurity measures cannot alone prevent all forms of cybercrime.
 - 4. Cybercrime is a problem that only affects individuals and businesses.

Question ID : 264330166400

Option 1 ID : 264330652649

Option 2 ID : 264330652648

Option 3 ID : 264330652650

Option 4 ID : 264330652647

Status : Answered

Chosen Option : 2

Comprehension:

Read the given passage and answer the questions that follow.

Cybercrime refers to any illegal activity that involves the use of technology or computer networks. As technology continues to advance and more people depend on it for their daily lives, the threat of cybercrime becomes more prevalent. Cybercriminals can carry out various types of attacks, including hacking, phishing, ransomware attacks and identity theft.

One of the most common forms of cybercrime is hacking, where a cybercriminal gains unauthorised access to a computer system or network. This type of attack can be particularly devastating, as it can give the hacker access to sensitive information such as financial data, personal information or intellectual property. Cybercriminals can also use malware to infiltrate systems, steal information or cause damage to the network.

Phishing is another common form of cybercrime that involves tricking people into providing personal information or login credentials. Cybercriminals will often create fake websites or emails that look legitimate to convince users to give up their information. These attacks can be very effective because they often target people's trust in legitimate businesses or institutions.

Ransomware attacks have become increasingly prevalent in recent years, where cybercriminals use malware to lock a victim's computer or files until a ransom is paid. This type of attack can be particularly damaging for businesses, as it can result in lost revenue, damage to reputation and a disruption in operations.

Identity theft is another major form of cybercrime, where cybercriminals steal someone's personal information to access financial accounts, apply for credit or commit other crimes in their name. This can be particularly damaging for individuals, as it can take months or even years to fully recover from the damage.

Cybercrime is a global problem that affects individuals, businesses and governments alike. It can cause significant financial losses, damage to reputation and disruptions to daily life. To combat cybercrime, individuals and organisations must take proactive measures to protect themselves, including using strong passwords, keeping software up to date and being cautious when opening emails or clicking links.

Governments and law enforcement agencies also have a role to play in combatting cybercrime. They can work to strengthen cybersecurity laws, increase funding for cybersecurity initiatives and collaborate with international partners to investigate and prosecute cybercriminals.

Overall, cybercrime is a complex and ever-evolving problem requiring a multi-faceted approach. By taking proactive measures and working together, we can reduce the threat of cybercrime and protect ourselves and our communities from its damaging effects.

SubQuestion No : 100

Q.100 Which of the following is the most appropriate title for the passage?

- Ans** 1. Cybersecurity Measures for Individuals and Organisations
 2. Types of Cybercrime and Their Effects
 3. The Global Problem of Cybercrime
 4. The Role of Governments in Combatting Cybercrime

Question ID : 264330166398

Option 1 ID : 264330652639

Option 2 ID : 264330652640

Option 3 ID : 264330652642

Option 4 ID : 264330652641

Status : Answered

Chosen Option : 2