



GOVT. OF NCT OF DELHI
Delhi Subordinate Services Selection Board
FC-18, Institutional Area, Karkardooma, Delhi – 110092.
www.dsssb.delhigovt.nic.in

Participant ID	2023
Participant Name	[REDACTED]
Test Center Name	Aadarsh Pariksha Kendra CENTER A - Gate No 1 - Noida Sector 64
Test Date	31/03/2026
Test Time	9:00 AM - 11:00 AM
Subject	Assistant Teacher Primary

Section : General Intelligence and Reasoning Ability

Q.1 If the water source is placed along M-N, as shown in the figure, which of the given options will be the water reflection of the given figure?



Ans



Question ID : 441009864930
Option 1 ID : 4410093412820
Option 2 ID : 4410093412821
Option 3 ID : 4410093412823
Option 4 ID : 4410093412822

Adda247

Test Prime

ALL EXAMS, ONE SUBSCRIPTION



1,00,000+
Mock Tests



**Personalised
Report Card**



**Unlimited
Re-Attempt**



600+
Exam Covered



25,000+ Previous
Year Papers



500%
Refund



ATTEMPT FREE MOCK NOW

Q.2 Refer to the following number, symbol series and answer the question. Counting to be done from left to right only. (All numbers are single-digit numbers only).

(Left) 2 ^ 7 ? \$ % < ? 4 3 \ & * @ # < 6 7 + 3 # (Right)

How many such numbers are there, each of which is immediately preceded by a symbol and also immediately followed by a symbol?

- Ans
- 1. One
 - 2. Two
 - 3. None
 - 4. Three

Question ID : 441009788247
 Option 1 ID : 4410093106988
 Option 2 ID : 4410093106989
 Option 3 ID : 4410093106987
 Option 4 ID : 4410093106990

Q.3 Refer to the following letter series and answer the question. (Counting to be done from left to right only).

(Left) Z M L Q B X K C H A W V N T R Y D F J P I A U K E O X Z (Right).

How many such vowels are there, each of which is immediately preceded by a vowel and immediately followed by a vowel?

- Ans
- 1. Three
 - 2. One
 - 3. Two
 - 4. Four

Question ID : 441009770867
 Option 1 ID : 4410093037464
 Option 2 ID : 4410093037462
 Option 3 ID : 4410093037463
 Option 4 ID : 4410093037461

Q.4 Based on the English alphabetical order, three of the following four letter-cluster pairs are alike in a certain way and thus form a group. Which letter-cluster pair DOES NOT belong to that group?

(Note: The odd one out is not based on the number of consonants/vowels or their position in the letter-cluster.)

- Ans
- 1. BK-FY
 - 2. NW-QK
 - 3. WF-ZT
 - 4. FO-IC

Question ID : 441009216444
 Option 1 ID : 441009849816
 Option 2 ID : 441009849818
 Option 3 ID : 441009849817
 Option 4 ID : 441009849815

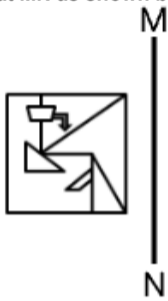
Q.5 What should come in place of the question mark (?) in the given series?

3, 11, 35, ?, 323, 971

- Ans
- 1. 108
 - 2. 107
 - 3. 106
 - 4. 105

Question ID : 441009216186
 Option 1 ID : 441009848786
 Option 2 ID : 441009848785
 Option 3 ID : 441009848784
 Option 4 ID : 441009848783

Q.6 Select the correct mirror image of the given figure when the mirror is placed at MN as shown below.



- Ans
- 1.
 - 2.
 - 3.
 - 4.

Question ID : 4410091614489
 Option 1 ID : 4410096376776
 Option 2 ID : 4410096376774
 Option 3 ID : 4410096376773
 Option 4 ID : 4410096376775

Q.7 Each of H, U, S, B, A, N and D has an exam on a different day of the week starting from Monday and ending on Sunday of the same week. D has an exam on Thursday. B has an exam two days before D. Only four people have exams between S and B. A has an exam on one of the days after B. U has an exam on the day immediately before H. S has an exam after B. How many people have exams between H and A?

- Ans 1. Two
 2. Three
 3. Four
 4. One

Question ID : 4410091518874
 Option 1 ID : 4410095998771
 Option 2 ID : 4410095998772
 Option 3 ID : 4410095998773
 Option 4 ID : 4410095998770

Q.8 What will come in the place of '?' in the following equation, if '+' and '-' are interchanged and 'x' and '÷' are interchanged?
 $849 + 131 - 861 \times 287 \div 836 \times 209 + 74 = ?$ 4224

- Ans 1. 566
 2. 665
 3. 656
 4. 666

Question ID : 441009554689
 Option 1 ID : 4410092174070
 Option 2 ID : 4410092174071
 Option 3 ID : 4410092174072
 Option 4 ID : 4410092174073

Q.9 E, F, G, H, K, L and N are sitting around a circular table facing the centre. Only one person sits between H and L when counted from the left of L. K sits third to the right of G. N sits third to the left of E. K sits to the immediate right of N. F is not an immediate neighbour of N. What is the position of K with respect to F?

- Ans 1. Second to the left
 2. Immediate left
 3. Third to the right
 4. Immediate right

Question ID : 441009216753
 Option 1 ID : 441009851053
 Option 2 ID : 441009851051
 Option 3 ID : 441009851054
 Option 4 ID : 441009851052

Q.10 Based on the English alphabetical order, three of the following four are alike in a certain way and thus form a group. Which is the one that does not belong to that group?
(Note: The odd man out is not based on the number of consonants/vowels or their position in the letter cluster)8505

- Ans
- 1. XWS
 - 2. SRN
 - 3. QPL
 - 4. HHC

Question ID : 441009782367
Option 1 ID : 4410093083472
Option 2 ID : 4410093083474
Option 3 ID : 4410093083473
Option 4 ID : 4410093083471

Q.11 Amina ranked 15th from the bottom and 12th from the top in her class. How many students are there in her class?

- Ans
- 1. 23
 - 2. 25
 - 3. 26
 - 4. 24

Question ID : 4410091518821
Option 1 ID : 4410095998562
Option 2 ID : 4410095998564
Option 3 ID : 4410095998565
Option 4 ID : 4410095998563

Q.12 Each of H, U, S, B, A, N and D has an exam on a different day of a week starting from Monday and ending on Sunday of the same week. H has an exam on Friday. Only two people have exams between N and H. Only four people have exams between S and N. A has an exam immediately after D. B doesn't have an exam on Monday. How many people have exam(s) between B and U?

- Ans
- 1. Three
 - 2. Two
 - 3. One
 - 4. Four

Question ID : 4410091518856
Option 1 ID : 4410095998704
Option 2 ID : 4410095998703
Option 3 ID : 4410095998702
Option 4 ID : 4410095998705

Q.13 This question is based on the five, three-digit numbers given below.

(Left) 761 693 728 643 723 (Right)

(Example- 697 – First digit = 6, second digit = 9 and third digit = 7)

NOTE - All operations to be done from left to right.

What will be the resultant if the second digit of the highest number is added to the third digit of the lowest number?

- Ans
- 1. 12
 - 2. 14
 - 3. 9
 - 4. 11

Question ID : 441009788295
 Option 1 ID : 4410093107180
 Option 2 ID : 4410093107179
 Option 3 ID : 4410093107182
 Option 4 ID : 4410093107181

Q.14 If 'A' stands for '+', 'B' stands for 'x', 'C' stands for '+' and 'D' stands for '-', what will come in place of question mark '?' in the following equation?
 $22 B 2 D 8 A 2 C 12 = ?$

- Ans
- 1. 52
 - 2. 40
 - 3. 32
 - 4. 46

Question ID : 4410091606222
 Option 1 ID : 4410096343915
 Option 2 ID : 4410096343913
 Option 3 ID : 4410096343912
 Option 4 ID : 4410096343914

Q.15 Which of the following letter-number clusters will replace the question mark (?) in the given series to make it logically complete?

ZLG20, GSN30, NZU40, UGB50, ?

- Ans
- 1. DNI60
 - 2. BNI60
 - 3. BMI60
 - 4. BNJ60

Question ID : 4410091614455
 Option 1 ID : 4410096376639
 Option 2 ID : 4410096376637
 Option 3 ID : 4410096376638
 Option 4 ID : 4410096376640

Q.16 OPRT is related to XYAC in a certain way based on the English alphabetical order. In the same way, FGJK is related to OPRT. To which of the following is STVX related, following the same logic?5088

- Ans
- 1. BBDG
 - 2. BDDG
 - 3. BCEG
 - 4. BCDG

Question ID : 441009779051
Option 1 ID : 4410093070209
Option 2 ID : 4410093070208
Option 3 ID : 4410093070207
Option 4 ID : 4410093070210

Q.17 Each vowel in the word ABESSIVE is changed to the second letter following it in the English alphabetical order and each consonant is changed to the letter immediately preceding it in the English alphabetical order. How many letters will appear exactly twice in the new group of letters thus formed?

- Ans
- 1. Three
 - 2. Two
 - 3. One
 - 4. Four

Question ID : 441009216474
Option 1 ID : 441009849937
Option 2 ID : 441009849936
Option 3 ID : 441009849935
Option 4 ID : 441009849938

Q.18 S is the sister of A. A is the brother of Y. B is the father of W. W is the son of Y. How is S related to B?

- Ans
- 1. Wife
 - 2. Mother
 - 3. Wife's mother
 - 4. Wife's sister

Question ID : 4410091614468
Option 1 ID : 4410096376691
Option 2 ID : 4410096376692
Option 3 ID : 4410096376690
Option 4 ID : 4410096376689

Q.19 6 is related to 41 following a certain logic. Following the same logic, 9 is related to 86. To which of the following is 11 related to, following the same logic?
(NOTE : Operations should be performed on the whole numbers, without breaking down the numbers into its constituent digits. E.g. 13 – Operations on 13 such as adding /subtracting /multiplying etc. to 13 can be performed. Breaking down 13 into 1 and 3 and then performing mathematical operations on 1 and 3 is not allowed.)²⁰⁰⁶

- Ans
- 1. 116
 - 2. 126
 - 3. 76
 - 4. 106

Question ID : 441009552471
Option 1 ID : 4410092165201
Option 2 ID : 4410092165199
Option 3 ID : 4410092165198
Option 4 ID : 4410092165200

Q.20 In a certain code language, 'PALE' is coded as '5328' and 'PILE' is coded as '7238'. What is the code for 'I' in the given code language?

- Ans
- 1. 3
 - 2. 2
 - 3. 7
 - 4. 5

Question ID : 4410091518955
Option 1 ID : 4410095999077
Option 2 ID : 4410095999076
Option 3 ID : 4410095999074
Option 4 ID : 4410095999075

Section : General Awareness

Q.1 India celebrates National Panchayati Raj Day in the month of April. On which of the following dates was it observed in the year 2025?

- Ans
- 1. 5th April, 2025
 - 2. 24th April, 2025
 - 3. 1st April, 2025
 - 4. 2nd April, 2025

Question ID : 441009465616
Option 1 ID : 4410091820997
Option 2 ID : 4410091820998
Option 3 ID : 4410091821000
Option 4 ID : 4410091820999

Q.2 180 g of glucose ($C_6H_{12}O_6$) is dissolved in 1 kg of water. At what temperature will water boil at 1.013 bar (K_b for water is $0.52K \text{ kg mol}^{-1}$)?

- Ans 1. 373.67 K
 2. 373.15 K
 3. 373.27 K
 4. 373.202 K

Question ID : 441009616199
Option 1 ID : 4410092418965
Option 2 ID : 4410092418967
Option 3 ID : 4410092418968
Option 4 ID : 4410092418966

Q.3 Which of the following provisions is included in the Constitution (One Hundred and Thirtieth Amendment) Bill, 2025, introduced in Lok Sabha on 20 August 2025?

- Ans 1. A Minister removed from office under these provisions cannot be re-appointed after being released from custody.
 2. In the case of Prime Minister of India, he/she must resign by the 90th consecutive day of custody.
 3. A Minister will be removed from office if he has been arrested and detained in custody for 30 consecutive days.
 4. It is not applicable to the State Cabinet Ministers unless advised by the Supreme Court of India

Question ID : 4410091461893
Option 1 ID : 4410095775674
Option 2 ID : 4410095775676
Option 3 ID : 4410095775675
Option 4 ID : 4410095775677

Q.4 What were the recommended national poverty lines for rural and urban areas by the Tendulkar Committee for 2011-12?

- Ans 1. ₹1,000 per capita per month for rural areas and ₹1,200 per capita per month for urban areas
 2. ₹816 per capita per month for rural areas and ₹1,000 per capita per month for urban areas
 3. ₹500 per capita per month for rural areas and ₹700 per capita per month for urban areas
 4. ₹700 per capita per month for rural areas and ₹800 per capita per month for urban areas

Question ID : 441009637462
Option 1 ID : 4410092503994
Option 2 ID : 4410092503993
Option 3 ID : 4410092503991
Option 4 ID : 4410092503992

Q.5 Why was NITI Aayog established as a replacement for the Planning Commission?

- Ans
- 1. To limit state participation in national policies
 - 2. To abolish financial allocation mechanisms
 - 3. To centralise policymaking in the Union Government
 - 4. To strengthen cooperative federalism in policy formulation

Question ID : 441009234587
Option 1 ID : 441009916772
Option 2 ID : 441009916773
Option 3 ID : 441009916771
Option 4 ID : 441009916770

Q.6 As per the 2025 announcement, what is the minimum financial requirement for acquiring U.S. citizenship through the newly introduced Gold Card Visa?

- Ans
- 1. \$5 million
 - 2. \$4 million
 - 3. \$6 million
 - 4. \$2 million

Question ID : 441009272986
Option 1 ID : 4410091060493
Option 2 ID : 4410091060492
Option 3 ID : 4410091060494
Option 4 ID : 4410091060491

Q.7 All Lok Adalat proceedings are deemed judicial proceedings under the Bharatiya Nyaya Sanhita passed in the year _____.

- Ans
- 1. 2020
 - 2. 2016
 - 3. 2018
 - 4. 2023

Question ID : 441009328072
Option 1 ID : 4410091278752
Option 2 ID : 4410091278754
Option 3 ID : 4410091278751
Option 4 ID : 4410091278753

Q.8 Which of the following statements correctly describes the Great Indian Desert?

- Ans
- 1. It is located in the northeastern part of India and receives high rainfall
 - 2. It lies to the east of the Aravalli Hills and has fertile alluvial soil
 - 3. It is a hot desert located in northwestern India with arid climate and sandy soil
 - 4. It is formed by volcanic eruptions and is rich in black soil

Question ID : 441009265386
Option 1 ID : 4410091031407
Option 2 ID : 4410091031408
Option 3 ID : 4410091031409
Option 4 ID : 4410091031410

Q.9 What was the outcome of the conflict between the Mughals and Chand Bibi in Ahmednagar during 1595?

- Ans
- 1. The Mughals were killed by the nobles.
 - 2. Chand Bibi successfully defeated the Mughals.
 - 3. The Mughals withdrew from Ahmednagar.
 - 4. A treaty was reached, and Chand Bibi ceded Berar to the Mughals.

Question ID : 441009205146
Option 1 ID : 441009806808
Option 2 ID : 441009806805
Option 3 ID : 441009806807
Option 4 ID : 441009806806

Q.10 The National Sports Policy (NSP), 2024, is built upon how many key pillars?

- Ans
- 1. Five
 - 2. Seven
 - 3. Four
 - 4. Six

Question ID : 441009256262
Option 1 ID : 441009998909
Option 2 ID : 441009998911
Option 3 ID : 441009998908
Option 4 ID : 441009998910

Q.11 Which of the following is NOT included in the calculation of Gross Domestic Product (GDP)?

- Ans
- 1. Net exports
 - 2. Sale or purchase of second-hand goods
 - 3. Government purchases of goods and services
 - 4. Transfer payments from the government

Question ID : 441009627130
Option 1 ID : 4410092462673
Option 2 ID : 4410092462675
Option 3 ID : 4410092462672
Option 4 ID : 4410092462674

Q.12 Which of the following island features is exclusively found in the Lakshadweep group but not in the Andaman and Nicobar group?

- Ans
- 1. Indigenous tribal settlements
 - 2. Atoll formations
 - 3. Volcanic activity
 - 4. Tropical evergreen forests

Question ID : 441009371518
Option 1 ID : 4410091451975
Option 2 ID : 4410091451974
Option 3 ID : 4410091451973
Option 4 ID : 4410091451972

Q.13 According to the Constitution of India, which of the following does not disqualify a person from being a member of a Panchayat?

- Ans
- 1. Being disqualified by the Election Commission under the Representation of the People Act, 1951
 - 2. Being below 21 years of age on the date of the election
 - 3. Being disqualified under a law made for elections to the State Legislature
 - 4. Being disqualified by a law made for the elections, by the State Legislature or the Parliament

Question ID : 441009672055
Option 1 ID : 4410092642313
Option 2 ID : 4410092642311
Option 3 ID : 4410092642310
Option 4 ID : 4410092642312

Q.14 Which two countries signed an agreement to create a joint investment fund for Ukraine's reconstruction in April 2025?

- Ans
- 1. Ukraine and the United States of America
 - 2. Ukraine and France
 - 3. Ukraine and Germany
 - 4. Ukraine and Poland

Question ID : 441009282546
Option 1 ID : 4410091097380
Option 2 ID : 4410091097381
Option 3 ID : 4410091097379
Option 4 ID : 4410091097378

Q.15 The concentration of a solution cannot be described by

- Ans
- 1. parts per million
 - 2. volume by mass percentage (V/w)
 - 3. mole fraction
 - 4. mass by volume percentage (w/V)

Question ID : 441009615740
Option 1 ID : 4410092417130
Option 2 ID : 4410092417132
Option 3 ID : 4410092417129
Option 4 ID : 4410092417131

Q.16 Where did Harihara and Bukka establish their capital city, Vijayanagar?

- Ans
- 1. On the banks of the Tungabhadra River
 - 2. On the banks of the Yamuna River
 - 3. On the banks of the Bhima River
 - 4. On the banks of the Godavari River

Question ID : 441009205166
Option 1 ID : 441009806887
Option 2 ID : 441009806885
Option 3 ID : 441009806886
Option 4 ID : 441009806888

Q.17 The 'Pallavi' section in Carnatic music is best described as:

- Ans
- 1. A single thematic line elaborated upon
 - 2. A detailed depiction of mythological stories
 - 3. The concluding devotional song
 - 4. The fastest part of improvisation

Question ID : 441009275802
Option 1 ID : 4410091071381
Option 2 ID : 4410091071382
Option 3 ID : 4410091071379
Option 4 ID : 4410091071380

Q.18 What is the primary difference between closed and open economies?

- Ans
- 1. International trade
 - 2. Domestic production
 - 3. Government intervention
 - 4. Consumer preferences

Question ID : 441009628866
Option 1 ID : 4410092469617
Option 2 ID : 4410092469618
Option 3 ID : 4410092469616
Option 4 ID : 4410092469619

Q.19 Jaisalmer Fort, built by Rawal Jaisal on the Trikuta Hill, has how many layers of walls?

- Ans
- 1. four
 - 2. three
 - 3. two
 - 4. five

Question ID : 441009606921
Option 1 ID : 4410092382803
Option 2 ID : 4410092382802
Option 3 ID : 4410092382801
Option 4 ID : 4410092382804

Q.20 During the First Battle of Panipat, Babur triumphed despite a smaller force; this success was chiefly due to the adoption of which of the following strategic battle techniques?

- Ans
- 1. Night-ambush guerrilla strikes
 - 2. Rumi method of warfare
 - 3. Heavy artillery horse charge
 - 4. Zig-zag cavalry manoeuvre

Question ID : 4410091551385
Option 1 ID : 4410096127910
Option 2 ID : 4410096127907
Option 3 ID : 4410096127909
Option 4 ID : 4410096127908

Section : Arithmetical and Numerical Ability

Q.1 A train 125 m long overtakes a man walking at 9 km/h in the same direction in 45 seconds. How many seconds will it take the train to completely cross another train 220 m long, coming from the opposite direction at 27 km/h?

- Ans
- 1. 46
 - 2. 16
 - 3. 27
 - 4. 12

Question ID : 441009546493
Option 1 ID : 4410092141371
Option 2 ID : 4410092141369
Option 3 ID : 4410092141368
Option 4 ID : 4410092141370

Q.2 A and B complete a work in 9 days. If A alone can do it in 36 days, then B alone can do three-fourth of the same work in _____ days.4035

- Ans
- 1. 36
 - 2. 18
 - 3. 27
 - 4. 9

Question ID : 441009897348
Option 1 ID : 4410093543465
Option 2 ID : 4410093543463
Option 3 ID : 4410093543464
Option 4 ID : 4410093543462

Q.3 A trader marked the selling price of an article at 20% above the article's cost price. At the time of selling, he allows a certain discount and suffers a loss of 1%. The discount allowed is _____.

- Ans
- 1. 19.5%
 - 2. 18.5%
 - 3. 20.5%
 - 4. 17.5%

Question ID : 44100947401
Option 1 ID : 441009188700
Option 2 ID : 441009188699
Option 3 ID : 441009188701
Option 4 ID : 441009188698

Q.4 The sum of 10 numbers is 600. Find their average.

- Ans
- 1. 58
 - 2. 59
 - 3. 60
 - 4. 61

Question ID : 441009581976
Option 1 ID : 4410092283033
Option 2 ID : 4410092283031
Option 3 ID : 4410092283030
Option 4 ID : 4410092283032

Q.5 If 54% of first number is equal to five-sevenths of second number, what is the ratio of first number to the second number?

- Ans
- 1. 251 : 186
 - 2. 255 : 194
 - 3. 246 : 192
 - 4. 250 : 189

Question ID : 441009125498
Option 1 ID : 441009498836
Option 2 ID : 441009498838
Option 3 ID : 441009498837
Option 4 ID : 441009498835

Q.6 What sum (in ₹) will earn a simple interest of ₹1680 in 3 years at 20% per annum?

- Ans
- 1. 2800
 - 2. 2700
 - 3. 2600
 - 4. 2900

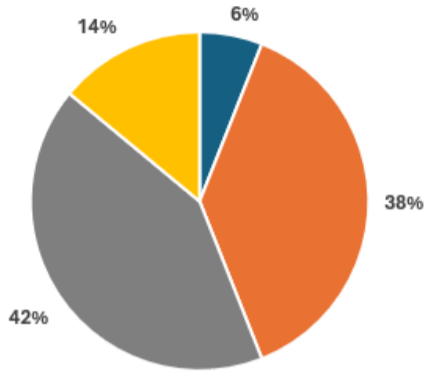
Question ID : 441009852623
Option 1 ID : 4410093363464
Option 2 ID : 4410093363465
Option 3 ID : 4410093363466
Option 4 ID : 4410093363467

Q.7 A product is sold at a profit of 67%. If the cost price and selling price are reversed, determine the loss percentage (rounded off to two decimal places).

- Ans
- 1. 41.15%
 - 2. 41.64%
 - 3. 40.07%
 - 4. 40.12%

Question ID : 441009894679
Option 1 ID : 4410093532787
Option 2 ID : 4410093532788
Option 3 ID : 4410093532789
Option 4 ID : 4410093532786

Q.8 The following pie chart shows the percentage of educated and uneducated men and women in a city.



■ Educated women ■ Uneducated women ■ Educated men ■ Uneducated men

What is the difference between the number of educated men and uneducated women, if the total number of men and women in the city is 5,88,000?

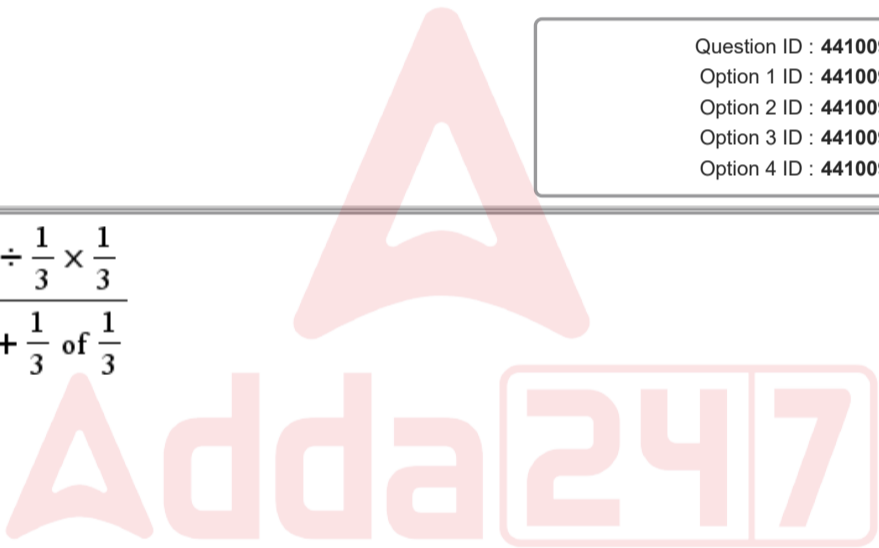
- Ans
- 1. 25,000
 - 2. 50,000
 - 3. 42,480
 - 4. 23,520

Question ID : 441009364140
 Option 1 ID : 4410091422810
 Option 2 ID : 4410091422812
 Option 3 ID : 4410091422813
 Option 4 ID : 4410091422811

Q.9

Simplify: $\frac{1}{3} \div \frac{1}{3} \times \frac{1}{3}$
 $\frac{1}{3} + \frac{1}{3}$ of $\frac{1}{3}$

- Ans
- 1. 0.75
 - 2. 0.5
 - 3. 0.83
 - 4. 0.67



Question ID : 44100944517
 Option 1 ID : 441009177311
 Option 2 ID : 441009177312
 Option 3 ID : 441009177314
 Option 4 ID : 441009177313

Q.10

Simplify: $\frac{\left(\frac{12}{18}\right)}{\left(\frac{12}{5}\right)} \div \left(\frac{2}{9} \times \frac{18}{6} + \frac{2}{6}\right) + \frac{5}{6} \div \frac{18}{12}$ of $\frac{12}{6}$

- Ans
- 1. $\frac{13}{14}$
 - 2. $\frac{5}{9}$
 - 3. $\frac{9}{4}$
 - 4. $\frac{1}{5}$

Question ID : 441009912366
 Option 1 ID : 4410093603718
 Option 2 ID : 4410093603715
 Option 3 ID : 4410093603716
 Option 4 ID : 4410093603717

Q.11 Three friends X, Y and Z started a business by investing a sum of money in the ratio of 7 : 5 : 6. After 6 months X withdraws half of his capital. If the sum invested by Z is ₹12000, out of a total annual profit of ₹65000, What is the difference between the X's and Y's profit?6282

- Ans
- 1. ₹845
 - 2. ₹1000
 - 3. ₹2730
 - 4. ₹595

Question ID : 441009899595
 Option 1 ID : 4410093552452
 Option 2 ID : 4410093552450
 Option 3 ID : 4410093552451
 Option 4 ID : 4410093552453

Q.12 A customer receives 950g sugar instead of 1kg from a dishonest shopkeeper. If the shopkeeper claims to sell at cost price, what is his actual profit percentage? (Round off your answer to two decimal places.)

- Ans
- 1. 5.26%
 - 2. 4.76%
 - 3. 5.13%
 - 4. 6.31%

Question ID : 4410091622216
 Option 1 ID : 4410096407654
 Option 2 ID : 4410096407652
 Option 3 ID : 4410096407653
 Option 4 ID : 4410096407655

Q.13 If by melting 8 solid metallic spheres, each of radius 5 cm, a big solid sphere is made, then what will be the radius of the big solid sphere?

- Ans
- 1. 20 cm
 - 2. 40 cm
 - 3. 10 cm
 - 4. 5 cm

Question ID : 441009125604
Option 1 ID : 441009499260
Option 2 ID : 441009499259
Option 3 ID : 441009499261
Option 4 ID : 441009499262

Q.14 Jyoti can cover a distance of 280 meters in 36 seconds. At the

- Ans
- 1. 24 km
 - 2. 30 km
 - 3. 26 km
 - 4. 28 km

Question ID : 44100920142
Option 1 ID : 44100980301
Option 2 ID : 44100980304
Option 3 ID : 44100980302
Option 4 ID : 44100980303

Q.15 Rodney has two grandsons Amit and Gopal. 15 year old Amit gets some money from Rodney's wealth and 16 year old Gopal gets the rest of the money. But Amit and Gopal will get the money only when they turn 21 years old. Till then the money will be kept in a bank earning interest at the rate of 4% per annum, compounded annually. When both turn 21, they receive the same amount. How much money (in ₹) had Rodney initially given Gopal, if the total money Rodney had was ₹25,500?

- Ans
- 1. 12,500
 - 2. 13,350
 - 3. 13,000
 - 4. 12,250

Question ID : 441009573214
Option 1 ID : 4410092247977
Option 2 ID : 4410092247978
Option 3 ID : 4410092247976
Option 4 ID : 4410092247979

Q.16 In a test, B got 54 marks while A got 75 marks, out of 110 maximum marks. What approximate percentage of B's marks was A's marks?5674

Ans 1. 138.89%

2. 72%

3. 68.18%

4. 110%

Question ID : 441009856956
Option 1 ID : 4410093380796
Option 2 ID : 4410093380797
Option 3 ID : 4410093380799
Option 4 ID : 4410093380798

Q.17 At a health club, 60% of the members are women and 40% of the members are men. If the average age of the men is 21 years and the average age of the women is 59 years, what is the average age (in years) of all the members?

Ans 1. 43.8

2. 34.5

3. 37.8

4. 40.2

Question ID : 441009539450
Option 1 ID : 4410092113196
Option 2 ID : 4410092113198
Option 3 ID : 4410092113197
Option 4 ID : 4410092113199

Q.18 A solid toy is in the form of a right circular cylinder with a hemispherical shape at one end and a cone at the other end. Their common radius is 2 cm and the height of the cylinder and cone are 15 cm and 8 cm, respectively. Find the volume (in cm^3) of the toy.683

Ans 1. 96π

2. 76π

3. 86π

4. 67π

Question ID : 441009621251
Option 1 ID : 4410092439139
Option 2 ID : 4410092439137
Option 3 ID : 4410092439138
Option 4 ID : 4410092439136

Q.19 Find the volume of a frustum of height 10 cm and radii of the two ends 5 cm and 2 cm, respectively.

- Ans 1. 130π cm³
 2. 150π cm³
 3. 125π cm³
 4. 120π cm³

Question ID : 441009593030
 Option 1 ID : 4410092327237
 Option 2 ID : 4410092327239
 Option 3 ID : 4410092327240
 Option 4 ID : 4410092327238

Q.20 A can complete a piece of work in 17 days. The portion of work remaining after A works alone for 7 days is:

- Ans 1. $\frac{6}{17}$
 2. $\frac{10}{17}$
 3. $\frac{7}{17}$
 4. $\frac{11}{17}$

Question ID : 441009914097
 Option 1 ID : 4410093610642
 Option 2 ID : 4410093610639
 Option 3 ID : 4410093610641
 Option 4 ID : 4410093610640

Section : English Language and Comprehension

Q.1 Select the option that can be used as a one-word substitute for the given group of words.

A person who refuses to obey the laws or rules of a society

- Ans 1. Faithful
 2. Authoritarian
 3. Anarchist
 4. Rightist

Question ID : 441009352151
 Option 1 ID : 4410091374956
 Option 2 ID : 4410091374955
 Option 3 ID : 4410091374954
 Option 4 ID : 4410091374957

Q.2 In the following sentence, choose the word that can replace the underlined phrase.

After his retirement, he chose to live as a person whose life is away from society and people.

- Ans
- 1. refugee
 - 2. nomad
 - 3. pioneer
 - 4. recluse

Question ID : 4410091127843

Option 1 ID : 4410094446934

Option 2 ID : 4410094446932

Option 3 ID : 4410094446935

Option 4 ID : 4410094446933

Q.3 Select the most appropriate option to fill in the blank.

I gifted _____ umbrella to the old man.

- Ans
- 1. a
 - 2. the
 - 3. an
 - 4. No article required

Question ID : 441009273836

Option 1 ID : 4410091063695

Option 2 ID : 4410091063697

Option 3 ID : 4410091063696

Option 4 ID : 4410091063698

Q.4 Fill in the blank with the correct option.

The company _____ a new policy regarding employee benefits.

- Ans
- 1. implemented
 - 2. travelled
 - 3. celebrated
 - 4. cooked

Question ID : 4410091027564

Option 1 ID : 4410094061790

Option 2 ID : 4410094061788

Option 3 ID : 4410094061787

Option 4 ID : 4410094061789

Q.5 Replace the underlined word segment with the correct idiom.

The final date of the workshop is not yet decided.

- Ans
- 1. set in stone
 - 2. up in the air
 - 3. under the weather
 - 4. on the cards

Question ID : 4410091555205
Option 1 ID : 4410096143420
Option 2 ID : 4410096143421
Option 3 ID : 4410096143422
Option 4 ID : 4410096143419

Q.6 Select the most appropriate option to fill in the blank.

Amitabh Bachchan is _____ for his iconic roles.

- Ans
- 1. raised
 - 2. celebrated
 - 3. forgiven
 - 4. abated

Question ID : 4410091524616
Option 1 ID : 4410096021681
Option 2 ID : 4410096021679
Option 3 ID : 4410096021680
Option 4 ID : 4410096021682

Q.7 Parts of a sentence are given below in jumbled order. Arrange the parts in the correct order to form a meaningful sentence.

- A. well-rounded and fulfilling life
- B. of success are significant, and
- C. both external and internal measures
- D. they can coexist to create a

- Ans
- 1. DCBA
 - 2. BDAC
 - 3. CBDA
 - 4. ABCD

Question ID : 4410091534550
Option 1 ID : 4410096061449
Option 2 ID : 4410096061448
Option 3 ID : 4410096061447
Option 4 ID : 4410096061450

Q.8 Identify the word which is not spelt correctly.
The teacher appreciated the student's dilligence, creativity, and enthusiasm.

- Ans
- 1. appreciated
 - 2. enthusiasm
 - 3. dilligence
 - 4. creativity

Question ID : 4410091555148
Option 1 ID : 4410096143238
Option 2 ID : 4410096143237
Option 3 ID : 4410096143235
Option 4 ID : 4410096143236

Q.9 Select the most appropriate article to fill in the blank. If no article is needed, select 'No article required'.

It takes two to make _____ quarrel.2988

- Ans
- 1. No article required
 - 2. a
 - 3. the
 - 4. an

Question ID : 441009498242
Option 1 ID : 4410091948180
Option 2 ID : 4410091948182
Option 3 ID : 4410091948183
Option 4 ID : 4410091948181

Q.10 Parts of the given sentence have been underlined. One of them contains a spelling error. The underlined parts are given as options with some changes. Select the option that correctly rectifies the error.

There is some concollation for fans because the team still stands a chance of winning the local championship.

- Ans
- 1. beecause
 - 2. consolation
 - 3. chempionship
 - 4. wiining

Question ID : 4410091385315
Option 1 ID : 4410095472001
Option 2 ID : 4410095472000
Option 3 ID : 4410095472003
Option 4 ID : 4410095472002

Q.11 Select the most appropriate synonym of the underlined word in the given sentence.

His decision was irrevocable.

- Ans 1. irrespective
 2. irreversible
 3. irrelevant
 4. irregular

Question ID : 4410091529524
Option 1 ID : 4410096041183
Option 2 ID : 4410096041185
Option 3 ID : 4410096041186
Option 4 ID : 4410096041184

Q.12 Select the most appropriate option that can substitute the underlined segment in the given proverb.

It's a risk, but the reward could be great. I say you go for it. Fortune governs the old.

- Ans 1. Fortune is not for the bolds.
 2. Fortune favors the bold.
 3. Fortune is all that matters.
 4. Fortune dictates the enemies.

Question ID : 4410091412453
Option 1 ID : 4410095578837
Option 2 ID : 4410095578836
Option 3 ID : 4410095578838
Option 4 ID : 4410095578839

Q.13 Parts of a sentence are given below. While the first part is in the correct place, the remaining parts (labelled P, Q, R and S) are jumbled up. Arrange the parts in the correct order to form a meaningful and coherent sentence.

1. Approximately 90 percent
P. occurs in the stratosphere,
Q. to approximately 50 km above the earth's surface
R. of the atmosphere's ozone
S. the region extending from 10 to 18 km⁶⁷⁵⁸

- Ans 1. RSQP
 2. PSRQ
 3. RPQS
 4. RPSQ

Question ID : 441009434414
Option 1 ID : 4410091697174
Option 2 ID : 4410091697177
Option 3 ID : 4410091697176
Option 4 ID : 4410091697175

Q.14 Select the most appropriate option to fill in the blank.

Corbett's expertise as a tracker of man-eating tigers and leopards _____
him great respect.

- Ans
- 1. expected
 - 2. abided
 - 3. acquired
 - 4. earned

Question ID : 4410091524608
Option 1 ID : 4410096021648
Option 2 ID : 4410096021650
Option 3 ID : 4410096021649
Option 4 ID : 4410096021647

Q.15 Select the option that is the most appropriate antonym of the highlighted word in the given sentence.

His explanation was **cryptic** and hard to follow.

- Ans
- 1. mysterious
 - 2. brief
 - 3. clear
 - 4. puzzling

Question ID : 4410091603206
Option 1 ID : 4410096332021
Option 2 ID : 4410096332023
Option 3 ID : 4410096332020
Option 4 ID : 4410096332022

Comprehension:

Read the given passage carefully and answer the following questions.

Rapid urbanization and the rise of high-rise buildings have made cities around the world more vulnerable to earthquakes, a problem particularly acute in seismically active regions. In many places, including parts of India, urban planning has not kept pace with the construction boom, leading to buildings that may not be adequately prepared to withstand a major seismic event. While India's seismic risk varies by region, the rapid growth of high-rises, often built without rigorous enforcement of building codes, presents a significant risk to millions of people. This lack of proactive planning puts communities in danger, as buildings and infrastructure could collapse during a severe quake. Japan, which faces a constant threat of earthquakes, offers a model for effective urban planning. The country's solution lies in a combination of strict building codes and innovative engineering. A key technique is base isolation, where buildings are constructed on flexible pads or bearings that absorb the ground's shaking, isolating the structure from seismic energy. Additionally, engineers use dampers, or shock absorbers, within the building's frame to dissipate energy from an earthquake, preventing the building from swaying too much. These technologies are not only a requirement for new construction but are also being retrofitted into older buildings. This proactive, technology-driven approach ensures that Japanese cities are built to coexist with seismic activity, offering a crucial lesson in resilience for other nations facing similar risks.

SubQuestion No : 16

Q.16 What is the correct tone for the passage?

- Ans
- 1. Humorous and satirical
 - 2. Critical and cautionary
 - 3. Optimistic and celebratory
 - 4. Indifferent and detached

Question ID : 4410091302360

Option 1 ID : 4410095141355

Option 2 ID : 4410095141353

Option 3 ID : 4410095141354

Option 4 ID : 4410095141352

Comprehension:

Read the given passage carefully and answer the following questions.

Rapid urbanization and the rise of high-rise buildings have made cities around the world more vulnerable to earthquakes, a problem particularly acute in seismically active regions. In many places, including parts of India, urban planning has not kept pace with the construction boom, leading to buildings that may not be adequately prepared to withstand a major seismic event. While India's seismic risk varies by region, the rapid growth of high-rises, often built without rigorous enforcement of building codes, presents a significant risk to millions of people. This lack of proactive planning puts communities in danger, as buildings and infrastructure could collapse during a severe quake. Japan, which faces a constant threat of earthquakes, offers a model for effective urban planning. The country's solution lies in a combination of strict building codes and innovative engineering. A key technique is base isolation, where buildings are constructed on flexible pads or bearings that absorb the ground's shaking, isolating the structure from seismic energy. Additionally, engineers use dampers, or shock absorbers, within the building's frame to dissipate energy from an earthquake, preventing the building from swaying too much. These technologies are not only a requirement for new construction but are also being retrofitted into older buildings. This proactive, technology-driven approach ensures that Japanese cities are built to coexist with seismic activity, offering a crucial lesson in resilience for other nations facing similar risks.

SubQuestion No : 17

Q.17 What is the primary structure of the passage?

- Ans
- 1. Compare and contrast
 - 2. Chronological
 - 3. Cause and effect
 - 4. Problem and solution

Question ID : 4410091302361

Option 1 ID : 4410095141358

Option 2 ID : 4410095141356

Option 3 ID : 4410095141359

Option 4 ID : 4410095141357

Comprehension:

Read the given passage carefully and answer the following questions.

Rapid urbanization and the rise of high-rise buildings have made cities around the world more vulnerable to earthquakes, a problem particularly acute in seismically active regions. In many places, including parts of India, urban planning has not kept pace with the construction boom, leading to buildings that may not be adequately prepared to withstand a major seismic event. While India's seismic risk varies by region, the rapid growth of high-rises, often built without rigorous enforcement of building codes, presents a significant risk to millions of people. This lack of proactive planning puts communities in danger, as buildings and infrastructure could collapse during a severe quake. Japan, which faces a constant threat of earthquakes, offers a model for effective urban planning. The country's solution lies in a combination of strict building codes and innovative engineering. A key technique is base isolation, where buildings are constructed on flexible pads or bearings that absorb the ground's shaking, isolating the structure from seismic energy. Additionally, engineers use dampers, or shock absorbers, within the building's frame to dissipate energy from an earthquake, preventing the building from swaying too much. These technologies are not only a requirement for new construction but are also being retrofitted into older buildings. This proactive, technology-driven approach ensures that Japanese cities are built to coexist with seismic activity, offering a crucial lesson in resilience for other nations facing similar risks.

SubQuestion No : 18

Q.18 Which of the following facts can be inferred from the passage?

- Ans**
- 1. Older buildings in Japan are not being updated with new safety features.
 - 2. Japan's urban planning is less concerned with seismic safety than India's.
 - 3. The majority of Indian cities are located in high seismic risk zones.
 - 4. The enforcement of building codes in India is a significant challenge.

Question ID : 4410091302362

Option 1 ID : 4410095141360

Option 2 ID : 4410095141361

Option 3 ID : 4410095141363

Option 4 ID : 4410095141362

Comprehension:

Read the given passage carefully and answer the following questions.

Rapid urbanization and the rise of high-rise buildings have made cities around the world more vulnerable to earthquakes, a problem particularly acute in seismically active regions. In many places, including parts of India, urban planning has not kept pace with the construction boom, leading to buildings that may not be adequately prepared to withstand a major seismic event. While India's seismic risk varies by region, the rapid growth of high-rises, often built without rigorous enforcement of building codes, presents a significant risk to millions of people. This lack of proactive planning puts communities in danger, as buildings and infrastructure could collapse during a severe quake. Japan, which faces a constant threat of earthquakes, offers a model for effective urban planning. The country's solution lies in a combination of strict building codes and innovative engineering. A key technique is base isolation, where buildings are constructed on flexible pads or bearings that absorb the ground's shaking, isolating the structure from seismic energy. Additionally, engineers use dampers, or shock absorbers, within the building's frame to dissipate energy from an earthquake, preventing the building from swaying too much. These technologies are not only a requirement for new construction but are also being retrofitted into older buildings. This proactive, technology-driven approach ensures that Japanese cities are built to coexist with seismic activity, offering a crucial lesson in resilience for other nations facing similar risks.

SubQuestion No : 19

Q.19 Based on the passage, what is the best synonym for "resilience"?

- Ans**
- 1. Vulnerability
 - 2. Fragility
 - 3. Adaptability
 - 4. Rigid

Question ID : 4410091302363

Option 1 ID : 4410095141365

Option 2 ID : 4410095141366

Option 3 ID : 4410095141364

Option 4 ID : 4410095141367

Comprehension:

Read the given passage carefully and answer the following questions.

Rapid urbanization and the rise of high-rise buildings have made cities around the world more vulnerable to earthquakes, a problem particularly acute in seismically active regions. In many places, including parts of India, urban planning has not kept pace with the construction boom, leading to buildings that may not be adequately prepared to withstand a major seismic event. While India's seismic risk varies by region, the rapid growth of high-rises, often built without rigorous enforcement of building codes, presents a significant risk to millions of people. This lack of proactive planning puts communities in danger, as buildings and infrastructure could collapse during a severe quake. Japan, which faces a constant threat of earthquakes, offers a model for effective urban planning. The country's solution lies in a combination of strict building codes and innovative engineering. A key technique is base isolation, where buildings are constructed on flexible pads or bearings that absorb the ground's shaking, isolating the structure from seismic energy. Additionally, engineers use dampers, or shock absorbers, within the building's frame to dissipate energy from an earthquake, preventing the building from swaying too much. These technologies are not only a requirement for new construction but are also being retrofitted into older buildings. This proactive, technology-driven approach ensures that Japanese cities are built to coexist with seismic activity, offering a crucial lesson in resilience for other nations facing similar risks.

SubQuestion No : 20

Q.20 Identify an appropriate title for the passage.

- Ans**
- 1. The Beautiful Marvels of Japanese Architecture
 - 2. The Dangers of Urbanization in High-Risk Earthquake Zones
 - 3. Japan's Proactive Earthquake Proof Urban Planning
 - 4. Innovative Engineering in the Modern Age

Question ID : 4410091302364

Option 1 ID : 4410095141370

Option 2 ID : 4410095141368

Option 3 ID : 4410095141371

Option 4 ID : 4410095141369

Section : Hindi Language and Comprehension

Q.1 "काला अक्षर भैस बराबर"- लोकोक्ति का अर्थ बताइए-

- Ans**
- 1. अनपढ़ होना
 - 2. अदूरदर्शी होना
 - 3. समदर्शी होना
 - 4. छिद्रान्वेषी होना

Question ID : 4410091618399

Option 1 ID : 4410096392469

Option 2 ID : 4410096392470

Option 3 ID : 4410096392468

Option 4 ID : 4410096392467

Q.2 दिए गए वाक्यांश एक वाक्य के अभिन्न अंग हैं, जो क्रम से नहीं दिए गए हैं निम्नलिखित वाक्यांशों को सही क्रम में लगाइए-

1. गोरखपुर की किताबें पढ़ने का यत्न करने लगे हैं।
2. संध्या पूजा करने और गीता प्रेस
3. वैसे-वैसे वह भी किशन दा की तरह रोज मंदिर जाने,
4. जैसे-जैसे उम्र ढल रही है

- Ans
- 1. 1,2,3,4
 - 2. 2,1,4,3
 - 3. 4,2,3,1
 - 4. 4,3,2,1

Question ID : 441009647690
Option 1 ID : 4410092544806
Option 2 ID : 4410092544807
Option 3 ID : 4410092544809
Option 4 ID : 4410092544808

Q.3 'बाँह गहे की लाज' लोकोक्ति का सही अर्थ क्या होगा?

- Ans
- 1. हराम की कमाई बेकार जाती है।
 - 2. शरण में आए की रक्षा करनी चाहिए।
 - 3. विपत्ति में बुद्धि काम नहीं करती है।
 - 4. किसी की शह पाकर ही आदमी अकड़ दिखाता है।

Question ID : 4410091624816
Option 1 ID : 4410096417794
Option 2 ID : 4410096417792
Option 3 ID : 4410096417791
Option 4 ID : 4410096417793

Q.4 नीचे दिए गए वाक्य के किस भाग में वर्तनी संबंधी अशुद्धि है? झौंपड़ी में एक साँप घुस आया।

- Ans
- 1. झौंपड़ी
 - 2. में एक
 - 3. साँप
 - 4. घुस आया।

Question ID : 4410091624819
Option 1 ID : 4410096417803
Option 2 ID : 4410096417804
Option 3 ID : 4410096417805
Option 4 ID : 4410096417806

Q.5 निम्नलिखित में से किस लोकोक्ति का अर्थ संगत नहीं है?

- Ans
- 1. कौड़ी नहीं गाँठ चले बाग की सैर - साधन नहीं तो काम क्यों करने लगे
 - 2. आँख एक नहीं कजरौटा दस-दस - बुरे काम का बुरा फल
 - 3. उसी की जूती उसी का सिर - जिसकी करनी, उसी को फल मिलता है
 - 4. उलटी गंगा पहाड़ को चली- विपरीत बात होना

Question ID : 4410091626281
Option 1 ID : 4410096423514
Option 2 ID : 4410096423513
Option 3 ID : 4410096423516
Option 4 ID : 4410096423515

Q.6 सही क्रिया-विशेषण का चयन कर वाक्य को पूर्ण कीजिए।
अभी बारिश हो रही थीधूप निकल आयी।

- Ans
- 1. मन से
 - 2. भूल से
 - 3. अचानक
 - 4. चुपके से

Question ID : 4410091253889
Option 1 ID : 4410094948613
Option 2 ID : 4410094948612
Option 3 ID : 4410094948611
Option 4 ID : 4410094948610

Q.7 निम्न में से 'कहाँ राजा भोज कहाँ गंगू तेली' लोकोक्ति का सही अर्थ कौन सा है?

- Ans
- 1. उच्च और साधारण की तुलना कैसी
 - 2. शरीर है तो कष्ट भी रहेगा
 - 3. दूर से चीज अच्छी लगती है
 - 4. शत्रु का उपकार करना

Question ID : 4410091526512
Option 1 ID : 4410096029169
Option 2 ID : 4410096029166
Option 3 ID : 4410096029167
Option 4 ID : 4410096029168

Q.8 निम्नलिखित वाक्य के रिक्त स्थान में रीतिवाचक क्रिया-विशेषण शब्द का प्रयोग करें -
'बस देर से मिली वह कार्यालय समय से नहीं पहुँचा।'

- Ans
- 1. मत
 - 2. इसलिए
 - 3. केवल
 - 4. आगे

Question ID : 4410091242636
Option 1 ID : 4410094903896
Option 2 ID : 4410094903895
Option 3 ID : 4410094903897
Option 4 ID : 4410094903898

Q.9 मन और बुद्धि की सभी शक्तियों का संचय परमावश्यक था। उपर्युक्त रेखांकित शब्द का पर्यायवाची क्या होगा ?

- Ans
- 1. विस्तार
 - 2. ग्रहण
 - 3. संकलन
 - 4. संचार

Question ID : 4410091624857
Option 1 ID : 4410096417957
Option 2 ID : 4410096417958
Option 3 ID : 4410096417956
Option 4 ID : 4410096417955

Q.10 निम्नांकित विकल्पों में से उचित कारक चिन्ह का चयन करके वाक्य पूर्ण करें-
बीती बातों को चिंता..... विषय बनाकर याद रखने..... आवश्यकता नहीं है।

- Ans
- 1. की, का
 - 2. का, की
 - 3. ने, से
 - 4. के, का

Question ID : 4410091312128
Option 1 ID : 4410095180191
Option 2 ID : 4410095180188
Option 3 ID : 4410095180190
Option 4 ID : 4410095180189

Q.11 दिए गए वाक्य में उचित क्रिया शब्द का चयन करके रिक्त स्थान की पूर्ति करें -
दीक्षांत समारोह में मंच पर कदम रखते ही छात्र के मन में खुशी की लहर -----गई।

- Ans
- 1. दमक
 - 2. मचल
 - 3. चमक
 - 4. दौड़

Question ID : 4410091547171
Option 1 ID : 4410096111560
Option 2 ID : 4410096111559
Option 3 ID : 4410096111557
Option 4 ID : 4410096111558

Q.12 निम्न में से 'रहे महमूद के अंडा देवे मसूद के' लोकोक्ति का सही अर्थ कौन-सा है ?

- Ans
- 1. अयोग्य व्यक्ति का चालाक होना
 - 2. खाना किसी का, काम किसी का
 - 3. दूसरों के लिए मर मिटना
 - 4. विपत्ति अकेले नहीं आती

Question ID : 4410091626349

Option 1 ID : 4410096423787

Option 2 ID : 4410096423786

Option 3 ID : 4410096423788

Option 4 ID : 4410096423785

Q.13 निम्नलिखित मुहावरे का अर्थ बताएं -
'आँख का काजल'

- Ans
- 1. अत्यंत प्रिय
 - 2. इशारा करना
 - 3. सामने ताकना
 - 4. झपकी आना

Question ID : 4410091530499

Option 1 ID : 4410096045079

Option 2 ID : 4410096045081

Option 3 ID : 4410096045080

Option 4 ID : 4410096045082

Q.14 निम्नलिखित विकल्पों में से कौन-सा वाक्य क्रम सही है?

- Ans
- 1. आकर चला गया एक मेहमान कल।
 - 2. एक मेहमान कल आकर चला गया।
 - 3. मेहमान कल आकर चला गया एक।
 - 4. चला गया एक मेहमान कल आकर।

Question ID : 4410091527826

Option 1 ID : 4410096034505

Option 2 ID : 4410096034504

Option 3 ID : 4410096034506

Option 4 ID : 4410096034503

Q.15 निम्नलिखित वाक्य को उचित कारक चिह्न से पूर्ण करें।
'मोहन _____ मुर्गियाँ रोज़ अंडे देती हैं।'

- Ans
- 1. का
 - 2. से
 - 3. के
 - 4. की

Question ID : 4410091237762

Option 1 ID : 4410094884577

Option 2 ID : 4410094884578

Option 3 ID : 4410094884576

Option 4 ID : 4410094884579

Comprehension:

निम्नलिखित गद्यांश को ध्यानपूर्वक पढ़कर पूछे गये प्रश्नों के सही उत्तर दीजिए।
सहयोग की भावना मानवीय संबंधों का प्राणसूत्र है जो व्यक्तिगत सीमाओं को सामूहिक ऊर्जा में रूपांतरित करती है। यह न केवल संघर्षों का अंत करती है बल्कि रचनात्मकता को भी पोषित करती है। स्वार्थी युग में सहयोग ही समाज को विघटन से बचाता है तथा समृद्धि का आधार बनाता है। प्रकृति में सहयोग सर्वत्र विद्यमान है चींटियाँ सामूहिक भोजन संग्रह करती हैं जबकि पक्षी झुंड में प्रवास करते हैं। मानव इतिहास में सहयोग ने चमत्कार रचे हैं। भगत सिंह जैसे क्रांतिकारियों का सहयोग स्वतंत्रता को गति प्रदान की। वैज्ञानिक अनुसंधान में अंतरराष्ट्रीय सहयोग ने चंद्रयान जैसी उपलब्धियाँ हासिल कीं। खेलक्षेत्र में खिलाड़ियों का आपसी सहयोग ही विजय का मंत्र बनता है। ग्रामीण अर्थव्यवस्था में सहकारी समितियाँ किसानों को सशक्त बनाती हैं। सहयोग विविध संस्कृतियों को एक मंच पर लाता है तथा वैश्विक शांति सुनिश्चित करता है। संयुक्त राष्ट्र जैसे संगठन सहयोग पर ही आधारित हैं। शिक्षा में गुरु-शिष्य परंपरा सहयोग का प्रतीक है। आपदा काल में पड़ोसी सहयोग जीवनदायी सिद्ध होता है। अंततः सहयोग की भावना ही सच्ची शक्ति है जो व्यक्ति को महान बनाती है तथा मानवजाति को एक परिवार के रूप में एकीकृत करती है।

SubQuestion No : 16**Q.16 सहयोग की भावना को गद्यांश में क्या कहा गया है?**

- Ans
- 1. व्यक्तिगत शक्ति का स्रोत
 - 2. स्वार्थ का आधार
 - 3. मानवीय संबंधों का प्राणसूत्र
 - 4. संघर्ष का कारण

Question ID : 4410091626930
Option 1 ID : 4410096426042
Option 2 ID : 4410096426045
Option 3 ID : 4410096426044
Option 4 ID : 4410096426043

Comprehension:

निम्नलिखित गद्यांश को ध्यानपूर्वक पढ़कर पूछे गये प्रश्नों के सही उत्तर दीजिए।
सहयोग की भावना मानवीय संबंधों का प्राणसूत्र है जो व्यक्तिगत सीमाओं को सामूहिक ऊर्जा में रूपांतरित करती है। यह न केवल संघर्षों का अंत करती है बल्कि रचनात्मकता को भी पोषित करती है। स्वार्थी युग में सहयोग ही समाज को विघटन से बचाता है तथा समृद्धि का आधार बनाता है। प्रकृति में सहयोग सर्वत्र विद्यमान है चींटियाँ सामूहिक भोजन संग्रह करती हैं जबकि पक्षी झुंड में प्रवास करते हैं। मानव इतिहास में सहयोग ने चमत्कार रचे हैं। भगत सिंह जैसे क्रांतिकारियों का सहयोग स्वतंत्रता को गति प्रदान की। वैज्ञानिक अनुसंधान में अंतरराष्ट्रीय सहयोग ने चंद्रयान जैसी उपलब्धियाँ हासिल कीं। खेलक्षेत्र में खिलाड़ियों का आपसी सहयोग ही विजय का मंत्र बनता है। ग्रामीण अर्थव्यवस्था में सहकारी समितियाँ किसानों को सशक्त बनाती हैं। सहयोग विविध संस्कृतियों को एक मंच पर लाता है तथा वैश्विक शांति सुनिश्चित करता है। संयुक्त राष्ट्र जैसे संगठन सहयोग पर ही आधारित हैं। शिक्षा में गुरु-शिष्य परंपरा सहयोग का प्रतीक है। आपदा काल में पड़ोसी सहयोग जीवनदायी सिद्ध होता है। अंततः सहयोग की भावना ही सच्ची शक्ति है जो व्यक्ति को महान बनाती है तथा मानवजाति को एक परिवार के रूप में एकीकृत करती है।

SubQuestion No : 17**Q.17 स्वार्थी युग में सहयोग समाज को किससे बचाता है?**

- Ans
- 1. विघटन से
 - 2. एकता से
 - 3. प्रगति से
 - 4. समृद्धि से

Question ID : 4410091626931
Option 1 ID : 4410096426046
Option 2 ID : 4410096426049
Option 3 ID : 4410096426047
Option 4 ID : 4410096426048

Comprehension:

निम्नलिखित गद्यांश को ध्यानपूर्वक पढ़कर पूछे गये प्रश्नों के सही उत्तर दीजिए।
सहयोग की भावना मानवीय संबंधों का प्राणसूत्र है जो व्यक्तिगत सीमाओं को सामूहिक ऊर्जा में रूपांतरित करती है। यह न केवल संघर्षों का अंत करती है बल्कि रचनात्मकता को भी पोषित करती है। स्वार्थी युग में सहयोग ही समाज को विघटन से बचाता है तथा समृद्धि का आधार बनाता है। प्रकृति में सहयोग सर्वत्र विद्यमान है चींटियाँ सामूहिक भोजन संग्रह करती हैं जबकि पक्षी झुंड में प्रवास करते हैं। मानव इतिहास में सहयोग ने चमत्कार रचे हैं। भगत सिंह जैसे क्रांतिकारियों का सहयोग स्वतंत्रता को गति प्रदान की। वैज्ञानिक अनुसंधान में अंतरराष्ट्रीय सहयोग ने चंद्रयान जैसी उपलब्धियाँ हासिल कीं। खेलक्षेत्र में खिलाड़ियों का आपसी सहयोग ही विजय का मंत्र बनता है। ग्रामीण अर्थव्यवस्था में सहकारी समितियाँ किसानों को सशक्त बनाती हैं। सहयोग विविध संस्कृतियों को एक मंच पर लाता है तथा वैश्विक शांति सुनिश्चित करता है। संयुक्त राष्ट्र जैसे संगठन सहयोग पर ही आधारित हैं। शिक्षा में गुरु-शिष्य परंपरा सहयोग का प्रतीक है। आपदा काल में पड़ोसी सहयोग जीवनदायी सिद्ध होता है। अंततः सहयोग की भावना ही सच्ची शक्ति है जो व्यक्ति को महान बनाती है तथा मानवजाति को एक परिवार के रूप में एकीकृत करती है।

SubQuestion No : 18**Q.18 खेलक्षेत्र में सहयोग को क्या कहा गया है?**

- Ans 1. विजय का मंत्र
 2. हार का कारण
 3. व्यक्तिगत प्रयास
 4. प्रतिस्पर्धा का अंत

Question ID : 4410091626932
 Option 1 ID : 4410096426052
 Option 2 ID : 4410096426051
 Option 3 ID : 4410096426053
 Option 4 ID : 4410096426050

Comprehension:

निम्नलिखित गद्यांश को ध्यानपूर्वक पढ़कर पूछे गये प्रश्नों के सही उत्तर दीजिए।
सहयोग की भावना मानवीय संबंधों का प्राणसूत्र है जो व्यक्तिगत सीमाओं को सामूहिक ऊर्जा में रूपांतरित करती है। यह न केवल संघर्षों का अंत करती है बल्कि रचनात्मकता को भी पोषित करती है। स्वार्थी युग में सहयोग ही समाज को विघटन से बचाता है तथा समृद्धि का आधार बनाता है। प्रकृति में सहयोग सर्वत्र विद्यमान है चींटियाँ सामूहिक भोजन संग्रह करती हैं जबकि पक्षी झुंड में प्रवास करते हैं। मानव इतिहास में सहयोग ने चमत्कार रचे हैं। भगत सिंह जैसे क्रांतिकारियों का सहयोग स्वतंत्रता को गति प्रदान की। वैज्ञानिक अनुसंधान में अंतरराष्ट्रीय सहयोग ने चंद्रयान जैसी उपलब्धियाँ हासिल कीं। खेलक्षेत्र में खिलाड़ियों का आपसी सहयोग ही विजय का मंत्र बनता है। ग्रामीण अर्थव्यवस्था में सहकारी समितियाँ किसानों को सशक्त बनाती हैं। सहयोग विविध संस्कृतियों को एक मंच पर लाता है तथा वैश्विक शांति सुनिश्चित करता है। संयुक्त राष्ट्र जैसे संगठन सहयोग पर ही आधारित हैं। शिक्षा में गुरु-शिष्य परंपरा सहयोग का प्रतीक है। आपदा काल में पड़ोसी सहयोग जीवनदायी सिद्ध होता है। अंततः सहयोग की भावना ही सच्ची शक्ति है जो व्यक्ति को महान बनाती है तथा मानवजाति को एक परिवार के रूप में एकीकृत करती है।

SubQuestion No : 19**Q.19 ग्रामीण अर्थव्यवस्था में सहकारी समितियाँ किसको सशक्त बनाती हैं?**

- Ans 1. किसानों को
 2. अधिकारियों को
 3. मजदूरों को
 4. व्यापारियों को

Question ID : 4410091626933
 Option 1 ID : 4410096426057
 Option 2 ID : 4410096426055
 Option 3 ID : 4410096426056
 Option 4 ID : 4410096426054

Comprehension:

निम्नलिखित गद्यांश को ध्यानपूर्वक पढ़कर पूछे गये प्रश्नों के सही उत्तर दीजिए।
सहयोग की भावना मानवीय संबंधों का प्राणसूत्र है जो व्यक्तिगत सीमाओं को सामूहिक ऊर्जा में रूपांतरित करती है। यह न केवल संघर्षों का अंत करती है बल्कि रचनात्मकता को भी पोषित करती है। स्वार्थी युग में सहयोग ही समाज को विघटन से बचाता है तथा समृद्धि का आधार बनाता है। प्रकृति में सहयोग सर्वत्र विद्यमान है चींटियाँ सामूहिक भोजन संग्रह करती हैं जबकि पक्षी झुंड में प्रवास करते हैं। मानव इतिहास में सहयोग ने चमत्कार रचे हैं। भगत सिंह जैसे क्रांतिकारियों का सहयोग स्वतंत्रता को गति प्रदान की। वैज्ञानिक अनुसंधान में अंतरराष्ट्रीय सहयोग ने चंद्रयान जैसी उपलब्धियाँ हासिल कीं। खेलक्षेत्र में खिलाड़ियों का आपसी सहयोग ही विजय का मंत्र बनता है। ग्रामीण अर्थव्यवस्था में सहकारी समितियाँ किसानों को सशक्त बनाती हैं। सहयोग विविध संस्कृतियों को एक मंच पर लाता है तथा वैश्विक शांति सुनिश्चित करता है। संयुक्त राष्ट्र जैसे संगठन सहयोग पर ही आधारित हैं। शिक्षा में गुरु-शिष्य परंपरा सहयोग का प्रतीक है। आपदा काल में पड़ोसी सहयोग जीवनदायी सिद्ध होता है। अंततः सहयोग की भावना ही सच्ची शक्ति है जो व्यक्ति को महान बनाती है तथा मानवजाति को एक परिवार के रूप में एकीकृत करती है।

SubQuestion No : 20**Q.20 गद्यांश के अनुसार सहयोग की भावना क्या है?**

- Ans 1. सच्ची शक्ति
 2. व्यक्तिगत शक्ति
 3. नकली शक्ति
 4. क्षणिक शक्ति

Question ID : 4410091626934
 Option 1 ID : 4410096426059
 Option 2 ID : 4410096426061
 Option 3 ID : 4410096426060
 Option 4 ID : 4410096426058

Section : Discipline1**Q.1 Which of the following environmental factors does not affect the personality of a child?**

- Ans 1. School environment
 2. Family
 3. Peer group
 4. Blood group

Question ID : 4410091570089
 Option 1 ID : 4410096201360
 Option 2 ID : 4410096201357
 Option 3 ID : 4410096201358
 Option 4 ID : 4410096201359

Q.2 If a child can walk upstairs with assistance and stack two to three cubes, the child is likely between which ages?

- Ans
- 1. 6-8 months
 - 2. 3-5 months
 - 3. 15-18 months
 - 4. 2-3 years

Question ID : 4410091611044
Option 1 ID : 4410096363032
Option 2 ID : 4410096363031
Option 3 ID : 4410096363033
Option 4 ID : 4410096363034

Q.3 Which Constitutional Amendment in India made the Right to Education a fundamental right for children aged 6 to 14 years?

- Ans
- 1. 86th Amendment Act, 2002
 - 2. 73rd Amendment Act, 1992
 - 3. 44th Amendment Act, 1978
 - 4. 42nd Amendment Act, 1976

Question ID : 4410091624578
Option 1 ID : 4410096416845
Option 2 ID : 4410096416846
Option 3 ID : 4410096416844
Option 4 ID : 4410096416843

Q.4 A child initially displays a difficult temperament but gradually becomes more sociable and resilient after forming a secure bond with a caregiver. Which personality characteristic does this developmental change best represent?

- Ans
- 1. Integration
 - 2. Dynamic
 - 3. Consistency
 - 4. Uniqueness

Question ID : 4410091631711
Option 1 ID : 4410096445061
Option 2 ID : 4410096445058
Option 3 ID : 4410096445059
Option 4 ID : 4410096445060

Q.5 Which level of moral reasoning is associated with concern for law, order, and maintaining a stable social system?

- Ans 1. Conventional level
 2. Postconventional level
 3. Punishment-obedience level
 4. Preconventional level

Question ID : 4410091601504
Option 1 ID : 4410096325615
Option 2 ID : 4410096325616
Option 3 ID : 4410096325617
Option 4 ID : 4410096325614

Q.6 A school implements a new curriculum unit focusing on resolving disputes non-violently and appreciating cultural diversity. According to peace education objectives, what is the primary anticipated impact on students?

- Ans 1. Improved memorization of historical dates
 2. Mastery of complex mathematical concepts
 3. Increased participation in sports activities
 4. Development of empathy and cooperation

Question ID : 4410091604781
Option 1 ID : 4410096338288
Option 2 ID : 4410096338291
Option 3 ID : 4410096338290
Option 4 ID : 4410096338289

Q.7 Which of the following is considered an environmental factor affecting personality development?

- Ans 1. Family background
 2. Eye color
 3. Height
 4. Blood type

Question ID : 4410091622546
Option 1 ID : 4410096408960
Option 2 ID : 4410096408961
Option 3 ID : 4410096408963
Option 4 ID : 4410096408962

Q.8 In the context of contemporary Indian society, which strategy best promotes national integration through school education programs that emphasize shared cultural values and collaborative projects among students from diverse backgrounds?

- Ans**
- 1. Hosting competitions based on regional languages
 - 2. Focusing solely on textbook memorization
 - 3. Arranging separate regional classes for students
 - 4. Organizing intercultural exchange programs in schools

Question ID : 4410091678847
Option 1 ID : 4410096623601
Option 2 ID : 4410096623602
Option 3 ID : 4410096623600
Option 4 ID : 4410096623599

Q.9 Which of the following options best illustrates gender discrimination in contemporary Indian society?

- Ans**
- 1. Encouraging women to participate in politics
 - 2. Offering maternity and paternity leave equally
 - 3. Providing equal access to education for all genders
 - 4. Unequal pay for men and women doing the same job

Question ID : 4410091607471
Option 1 ID : 4410096348858
Option 2 ID : 4410096348859
Option 3 ID : 4410096348857
Option 4 ID : 4410096348856

Q.10 In the context of socialization, how does the family primarily contribute to the learner's development within society?

- Ans**
- 1. By instilling foundational beliefs, customs and traditions from an early age
 - 2. By introducing learners to formal subject knowledge
 - 3. By promoting new technological skills and encouraging peer discussions
 - 4. By facilitating participation in extra-curricular activities

Question ID : 4410091693246
Option 1 ID : 4410096679119
Option 2 ID : 4410096679122
Option 3 ID : 4410096679120
Option 4 ID : 4410096679121

Q.11 An inspector finds that a secondary school is using outdated, biased textbooks and offers guidance on selecting new materials. This advisory action aligns with which role outlined for education inspectors in the Mudaliar Commission's report?

- Ans
- 1. Solely punitive supervision
 - 2. Limiting inspector visits to urban schools
 - 3. Focusing only on administrative audits
 - 4. Advisory and supportive role for inspectors

Question ID : 4410091628813
Option 1 ID : 4410096433399
Option 2 ID : 4410096433400
Option 3 ID : 4410096433401
Option 4 ID : 4410096433398

Q.12 If a curriculum aims to prepare students for both global citizenship and national responsibilities, which guiding principle is most relevant?

- Ans
- 1. Integration
 - 2. Uniformity
 - 3. Isolation
 - 4. Segmentation

Question ID : 4410091678843
Option 1 ID : 4410096623585
Option 2 ID : 4410096623584
Option 3 ID : 4410096623586
Option 4 ID : 4410096623583

Q.13 During which stage of moral development do children typically start to value laws and authority as important for maintaining social order?

- Ans
- 1. Pre-conventional stage
 - 2. Intuitive-projective stage
 - 3. Post-conventional stage
 - 4. Conventional stage

Question ID : 4410091686554
Option 1 ID : 4410096653063
Option 2 ID : 4410096653065
Option 3 ID : 4410096653064
Option 4 ID : 4410096653062

Q.14 When examining the principle that development occurs from the center of the body outward, which term best describes this pattern in a child's growth?

- Ans
- 1. Sequential development pattern
 - 2. Cephalocaudal development pattern
 - 3. Proximodistal development pattern
 - 4. Linear development pattern

Question ID : 4410091628544
Option 1 ID : 4410096432337
Option 2 ID : 4410096432334
Option 3 ID : 4410096432335
Option 4 ID : 4410096432336

Q.15 A government implements universal adult franchise, guaranteeing 'one man one vote' (Political Equality), but fails to address deep-rooted historical land distribution disparities. This scenario exemplifies a danger to political democracy, as articulated by Dr. B.R. Ambedkar, due to the persistence of:

- Ans
- 1. Non-justifiable directive principles
 - 2. Weak federal list structure
 - 3. Socio-economic graded inequality
 - 4. Legislative political apathy

Question ID : 4410091549590
Option 1 ID : 4410096121063
Option 2 ID : 4410096121064
Option 3 ID : 4410096121062
Option 4 ID : 4410096121061

Q.16 What is the main objective of Universalisation of Elementary Education (UEE) under the RTE Act 2009?

- Ans
- 1. To focus only on urban children for education
 - 2. To introduce competitive exams at elementary level
 - 3. To provide free and compulsory education to children aged 6 to 14 years
 - 4. To make elementary education private and paid

Question ID : 4410091607611
Option 1 ID : 4410096349406
Option 2 ID : 4410096349407
Option 3 ID : 4410096349404
Option 4 ID : 4410096349405

Q.17 During childhood, a key principle stating that development moves from the head downward is _____.

- Ans
- 1. Proximity rule
 - 2. Sequential order
 - 3. Cephalocaudal
 - 4. Uniform pattern

Question ID : 4410091538555
Option 1 ID : 4410096077485
Option 2 ID : 4410096077487
Option 3 ID : 4410096077486
Option 4 ID : 4410096077488

Q.18 Education helps promote peaceful coexistence among nations mainly by developing:

- Ans
- 1. Strict national loyalty placed above all
 - 2. Uniform political ideologies across the world
 - 3. Attitudes of cooperation and mutual understanding
 - 4. Competitive economic practices among nations

Question ID : 4410091680605
Option 1 ID : 4410096630137
Option 2 ID : 4410096630134
Option 3 ID : 4410096630135
Option 4 ID : 4410096630136

Q.19 A state government refuses to fund elementary education for children aged 6 to 14. Which constitutional provision is being violated?

- Ans
- 1. Article 45
 - 2. Article 19
 - 3. Article 30
 - 4. Article 21A

Question ID : 4410091692789
Option 1 ID : 4410096677202
Option 2 ID : 4410096677199
Option 3 ID : 4410096677200
Option 4 ID : 4410096677201

Q.20 The Preamble to the Indian Constitution declares India to be a:

- Ans
- 1. Sovereign, Federal, Secular, Democratic Republic
 - 2. Federal, Socialist, Secular, Democratic Republic
 - 3. Socialist, Secular, Federal, Democratic Republic
 - 4. Sovereign, Socialist, Secular, Democratic Republic

Question ID : 4410091550857
Option 1 ID : 4410096125709
Option 2 ID : 4410096125707
Option 3 ID : 4410096125710
Option 4 ID : 4410096125708

Section : Discipline2

Q.1 When learners infer meanings of unfamiliar words from a poem without dictionary use, the literary text is functioning mainly as:

- Ans
- 1. Contextualized linguistic input
 - 2. A source of fixed vocabulary lists
 - 3. An exercise in translation accuracy
 - 4. A model for prescriptive grammar

Question ID : 4410091638255
Option 1 ID : 4410096470701
Option 2 ID : 4410096470702
Option 3 ID : 4410096470700
Option 4 ID : 4410096470703

Q.2 Which type of peer tutoring involves older students helping younger students?

- Ans
- 1. Cross-age tutoring
 - 2. Reciprocal peer tutoring
 - 3. Same-age tutoring
 - 4. Group tutoring

Question ID : 4410091681882
Option 1 ID : 4410096634898
Option 2 ID : 4410096634900
Option 3 ID : 4410096634899
Option 4 ID : 4410096634901

Q.3 What analytical distinction justifies transitioning from simple daily diary entries to a formal reflective journal for deeper self-understanding?

- Ans
- 1. Avoids emotional responses
 - 2. Increases quantity of writing
 - 3. Simplifies recording daily events
 - 4. Enhances critical thought clarity

Question ID : 4410091557241
Option 1 ID : 4410096151494
Option 2 ID : 4410096151493
Option 3 ID : 4410096151496
Option 4 ID : 4410096151495

Q.4 A school leader is designing a language policy to foster early literacy in a region where children speak different mother tongues at home. Which policy best reflects the scope of multilingualism in education?

- Ans
- 1. Promote additive bilingualism in classroom instruction
 - 2. Enforce rapid transition to the dominant language
 - 3. Discourage use of home languages in school
 - 4. Focus only on monolingual assessment

Question ID : 4410091623520
Option 1 ID : 4410096412666
Option 2 ID : 4410096412664
Option 3 ID : 4410096412665
Option 4 ID : 4410096412667

Q.5 When guiding students to observe a local festival as part of cultural studies, what should the teacher emphasize to maximize learning?

- Ans
- 1. Focusing only on the festival's schedule.
 - 2. Encouraging to note rituals with meanings.
 - 3. Assigning reading about unrelated topics.
 - 4. Teaching only through classroom lectures.

Question ID : 4410091641351
Option 1 ID : 4410096482551
Option 2 ID : 4410096482552
Option 3 ID : 4410096482553
Option 4 ID : 4410096482554

Q.6 What is the key benefit of multilingualism in early education?

- Ans
- 1. It promotes cognitive flexibility in children.
 - 2. It encourages learning only one language.
 - 3. It limits social interaction.
 - 4. It increases physical and emotional strength.

Question ID : 4410091698404
Option 1 ID : 4410096699277
Option 2 ID : 4410096699280
Option 3 ID : 4410096699279
Option 4 ID : 4410096699278

Q.7 A science teacher first demonstrates a chemical reaction before asking students to perform the experiment themselves. Which maxim is illustrated here?

- Ans
- 1. Focusing only on theoretical discussion
 - 2. Proceeding from concrete to abstract
 - 3. Starting with abstract to concrete
 - 4. Assigning only textbook reading

Question ID : 4410091678969
Option 1 ID : 4410096624087
Option 2 ID : 4410096624085
Option 3 ID : 4410096624086
Option 4 ID : 4410096624088

Q.8 Which of the following best describes how celebrating an iconic cultural figure can contribute to an individual's understanding of self in a contemporary context?

- Ans
- 1. Requires adopting the figure's lifestyle without reflection.
 - 2. Builds personal values via the figure's ideals and deeds.
 - 3. Centers solely on the figure's historical significance only.
 - 4. Demands rote learning of the figure's life history facts.

Question ID : 4410091624769
Option 1 ID : 4410096417617
Option 2 ID : 4410096417615
Option 3 ID : 4410096417618
Option 4 ID : 4410096417616

Q.9 What role do cultural icons play in bridging diverse communities today?

- Ans
- 1. Promoting exclusive narratives only
 - 2. Reflecting marginalized voices and stories
 - 3. Minimizing discussions on identity
 - 4. Highlighting divisions among cultural groups

Question ID : 4410091553660
Option 1 ID : 4410096137313
Option 2 ID : 4410096137311
Option 3 ID : 4410096137314
Option 4 ID : 4410096137312

Q.10 Which statement accurately reflects the nature of pedagogy in the classroom?

- Ans
- 1. Pedagogy is only about delivering content through lectures efficiently.
 - 2. Pedagogy involves both teacher strategies and student participation actively.
 - 3. Pedagogy means following textbooks strictly without any adaptation needed.
 - 4. Pedagogy excludes assessment of learning and focuses solely on teaching.

Question ID : 4410091637277
Option 1 ID : 4410096466647
Option 2 ID : 4410096466646
Option 3 ID : 4410096466649
Option 4 ID : 4410096466648

Q.11 What is the primary medium of human communication?

- Ans
- 1. Culture
 - 2. Language
 - 3. Society
 - 4. Gesture

Question ID : 4410091629364
Option 1 ID : 4410096435539
Option 2 ID : 4410096435538
Option 3 ID : 4410096435540
Option 4 ID : 4410096435541

Q.12 How does integrating peer tutoring as a pedagogical practice benefit the overall curriculum in diploma programs?

- Ans
- 1. Applies uniform teaching methods to all students.
 - 2. Minimizes active student participation in class.
 - 3. Prioritizes teacher-led instruction exclusively.
 - 4. Addresses diverse needs via collaborative engagement.

Question ID : 4410091627326
Option 1 ID : 4410096427591
Option 2 ID : 4410096427593
Option 3 ID : 4410096427592
Option 4 ID : 4410096427590

Q.13 Which combination correctly matches a system of units with its basic length, mass, and time units?

- Ans
- 1. FPS: metre, kilogram, second
 - 2. CGS: centimetre, gram, second
 - 3. MKS: foot, pound, second
 - 4. CGS: metre, kilogram, second

Question ID : 4410091612100
Option 1 ID : 4410096367230
Option 2 ID : 4410096367227
Option 3 ID : 4410096367229
Option 4 ID : 4410096367228

Q.14 A diploma institute wants to update its curriculum to meet current industry needs. Which step should be prioritized to ensure the new curriculum remains relevant for learners and society?

- Ans
- 1. Prioritize updates to assessment methods and grading alone
 - 2. Increase course content volume to include additional topics
 - 3. Rely solely on previous years' syllabi for new curriculum
 - 4. Consult stakeholders, experts, educators, and learners for input

Question ID : 4410091624615
Option 1 ID : 4410096416994
Option 2 ID : 4410096416992
Option 3 ID : 4410096416993
Option 4 ID : 4410096416991

Q.15 Which term best describes the role of iconic cultural figures in shaping a community's cultural world-view?

- Ans
- 1. Cultural agents – they influence values, beliefs, and practices within a society through their work, actions, or public presence.
 - 2. Entertainment personalities – their role is limited to providing amusement without affecting cultural values.
 - 3. Passive observers – since iconic figures have little or no influence on the cultural perspectives of the community.
 - 4. Political leaders – because only elected officials determine cultural norms and development.

Question ID : 4410091650107
Option 1 ID : 4410096516546
Option 2 ID : 4410096516549
Option 3 ID : 4410096516548
Option 4 ID : 4410096516547

Q.16 A teacher in a multilingual classroom in Varanasi notices that some children code-mix during playground conversations. To comprehensively assess their language pragmatics, which combination of assessment sources would best provide reliable insights?

- Ans
- 1. Observation notes and peer feedback forms
 - 2. Single end-term written exams
 - 3. Only standardized oral reading tests
 - 4. Exclusive use of home language logs

Question ID : 4410091606436
Option 1 ID : 4410096344756
Option 2 ID : 4410096344758
Option 3 ID : 4410096344757
Option 4 ID : 4410096344759

Q.17 How does Schopenhauer suggest humans can temporarily escape the 'blind will' that drives existence?

- Ans
- 1. Through accumulation of material wealth
 - 2. Through aesthetic contemplation of art
 - 3. Through political participation
 - 4. Through scientific experimentation

Question ID : 4410091681763
Option 1 ID : 4410096634426
Option 2 ID : 4410096634428
Option 3 ID : 4410096634427
Option 4 ID : 4410096634429

Q.18 A teacher introduces a topic by first addressing learners' interests and prior mental readiness and later organizes the content in a logical sequence. This reflects the maxim of:

- Ans
- 1. Direct to indirect
 - 2. Psychological to logical
 - 3. Known to unknown
 - 4. Concrete to abstract

Question ID : 4410091636241
Option 1 ID : 4410096462902
Option 2 ID : 4410096462904
Option 3 ID : 4410096462901
Option 4 ID : 4410096462903

Q.19 Why might an assessor use both oral storytelling activities and written tasks when evaluating a child's early literacy skills?

- Ans
- 1. Different assessment modes reveal varied language and literacy strengths
 - 2. Using only one type of activity eliminates all assessment bias
 - 3. Oral activities are less significant for learning outcomes
 - 4. Written tasks alone provide the most accurate evaluation evidence

Question ID : 4410091628731
Option 1 ID : 4410096433070
Option 2 ID : 4410096433073
Option 3 ID : 4410096433072
Option 4 ID : 4410096433071

Q.20 What does the System Approach mainly aim to achieve in curriculum planning?

- Ans
- 1. Simple textbook based teaching without any modification
 - 2. Logical coordination through input process output cycle
 - 3. Teacher centred approach ignoring learner requirements
 - 4. Random decision making about instructional strategies

Question ID : 4410091570648
 Option 1 ID : 4410096203576
 Option 2 ID : 4410096203575
 Option 3 ID : 4410096203578
 Option 4 ID : 4410096203577

Section : Discipline3

Q.1 A school tracks student attendance, learning outcomes, and teaching quality to improve performance. This represents:

- Ans
- 1. Educational accountability measures
 - 2. Institutional effectiveness metrics
 - 3. School quality assurance benchmarks
 - 4. Academic performance indicators

Question ID : 4410091568392
 Option 1 ID : 4410096194855
 Option 2 ID : 4410096194852
 Option 3 ID : 4410096194853
 Option 4 ID : 4410096194854

Q.2 A candidate is preparing a formal report for a recruitment panel. While reviewing the sentence 'The staff has submitted their feedback promptly,' which revision best demonstrates an understanding of both grammatical correctness and contextual appropriateness for this setting?

- Ans
- 1. The staff members have submitted their feedback promptly.
 - 2. The staff have submitted its feedback promptly.
 - 3. The staff members has submitted their feedback promptly.
 - 4. The staff has submitted their feedback promptly.

Question ID : 4410091623863
 Option 1 ID : 4410096414033
 Option 2 ID : 4410096414032
 Option 3 ID : 4410096414035
 Option 4 ID : 4410096414034

Q.3 A school administrator is designing a program to help students navigate real-life social situations and adapt to changing group dynamics. According to Sternberg's triarchic theory, which type of intelligence should be emphasized in the curriculum to best prepare students for success in their socio-cultural context?

- Ans**
- 1. Practical intelligence should be emphasized in the curriculum to best prepare students for success in their socio-cultural context.
 - 2. General intelligence should be emphasized in the curriculum to best prepare students for success in their socio-cultural context.
 - 3. Analytic intelligence should be emphasized in the curriculum to best prepare students for success in their socio-cultural context.
 - 4. Creative intelligence should be emphasized in the curriculum to best prepare students for success in their socio-cultural context.

Question ID : 4410091623887
Option 1 ID : 4410096414130
Option 2 ID : 4410096414131
Option 3 ID : 4410096414128
Option 4 ID : 4410096414129

Q.4 Which of the following is a basic characteristic of a good educator?

- Ans**
- 1. Focuses only on exams and ignores students' understanding of concepts
 - 2. Concentrates only on administrative work and school management tasks
 - 3. Relies entirely on textbooks without engaging students in activities
 - 4. Shows care for students, communicates clearly, and encourages learning actively

Question ID : 4410091546569
Option 1 ID : 4410096109157
Option 2 ID : 4410096109155
Option 3 ID : 4410096109156
Option 4 ID : 4410096109158

Q.5 Students get different results measuring a desk using handspans. What should the teacher highlight next?

- Ans**
- 1. Larger objects cannot be measured
 - 2. Standard units are needed for accurate comparison
 - 3. Measuring is not required in early classes
 - 4. Non-standard units always give correct measurements

Question ID : 4410091568363
Option 1 ID : 4410096194736
Option 2 ID : 4410096194738
Option 3 ID : 4410096194739
Option 4 ID : 4410096194737

Q.6 Which statement best describes English as a global language?

- Ans
- 1. It is the official language used by all countries.
 - 2. It is the only language spoken across the world.
 - 3. It is used as a common language in different countries.
 - 4. It is spoken only within European countries.

Question ID : 4410091609339
Option 1 ID : 4410096356280
Option 2 ID : 4410096356282
Option 3 ID : 4410096356281
Option 4 ID : 4410096356283

Q.7 Which of the following is a practical example of 'repression' as a defense mechanism in students?

- Ans
- 1. The unconscious blocking of painful, anxiety-provoking memories
 - 2. A student expressing anger openly toward peers after a setback
 - 3. A student explaining poor performance by blaming the difficulty of the test
 - 4. A student consciously deciding to ignore feedback from a teacher

Question ID : 4410091641764
Option 1 ID : 4410096484133
Option 2 ID : 4410096484136
Option 3 ID : 4410096484135
Option 4 ID : 4410096484134

Q.8 Imagine you are designing a mathematics lesson for primary children on the properties of rectangles. Which approach would best utilize the experimental and inductive nature of mathematics, according to the described method, and why?

- Ans
- 1. Explaining the definition of a rectangle to the students before engaging them in activities
 - 2. Providing a worksheet for independent practice and recall of rectangle properties
 - 3. Having students recite and discuss rectangle properties directly from the textbook
 - 4. Facilitating students to measure sides and angles of rectangles to identify common properties

Question ID : 4410091623808
Option 1 ID : 4410096413805
Option 2 ID : 4410096413806
Option 3 ID : 4410096413807
Option 4 ID : 4410096413804

Q.9 A student who blames the teacher for failing an exam instead of accepting poor preparation is using which defence mechanism?

- Ans
- 1. Repression
 - 2. Rationalization
 - 3. Sublimation
 - 4. Projection

Question ID : 4410091606625
Option 1 ID : 4410096345497
Option 2 ID : 4410096345496
Option 3 ID : 4410096345499
Option 4 ID : 4410096345498

Q.10 A teacher encourages students to use newly learned words in sentences to make them part of their everyday speech. This activity aims to develop:

- Ans
- 1. Receptive vocabulary gained mainly through exposure and recognition
 - 2. Vocabulary knowledge limited to recall of word meanings
 - 3. Active vocabulary developed through purposeful and meaningful use
 - 4. Vocabulary awareness without consistent communicative application

Question ID : 4410091546977
Option 1 ID : 4410096110778
Option 2 ID : 4410096110780
Option 3 ID : 4410096110779
Option 4 ID : 4410096110781

Q.11 In a classroom, a bell rings before lunch every day, and students start feeling hungry when they hear the bell. What type of learning is this an example of?

- Ans
- 1. Classical Conditioning
 - 2. Insight Learning
 - 3. Trial and Error
 - 4. Operant Conditioning

Question ID : 4410091635484
Option 1 ID : 4410096459956
Option 2 ID : 4410096459957
Option 3 ID : 4410096459955
Option 4 ID : 4410096459958

Q.12 Which of the following approaches is recommended for effective grammar teaching?

- Ans
- 1. Teaching grammar in isolation using sentence exercises
 - 2. Avoiding any real-life communication practice
 - 3. Teaching grammar in context, through discourse, and making it engaging
 - 4. Focusing on grammatical rule and terminology

Question ID : 4410091576747
Option 1 ID : 4410096227840
Option 2 ID : 4410096227843
Option 3 ID : 4410096227842
Option 4 ID : 4410096227841

Q.13 Which of the following is a major factor shaping gendered roles in Indian society?

- Ans
- 1. Shared norms, traditions, and cultural practices
 - 2. Government policies related to the economy
 - 3. General weather patterns in a region
 - 4. Individual choices made without clear reasons

Question ID : 4410091548417
Option 1 ID : 4410096116369
Option 2 ID : 4410096116371
Option 3 ID : 4410096116368
Option 4 ID : 4410096116370

Q.14 Which of the following characteristic does not make a school effective?

- Ans
- 1. Weak organization framework
 - 2. Environment conducive to learning
 - 3. Effective student welfare system
 - 4. Strong and professional principal

Question ID : 4410091548086
Option 1 ID : 4410096115051
Option 2 ID : 4410096115050
Option 3 ID : 4410096115052
Option 4 ID : 4410096115049

Q.15 To assess whether Grade 3 children genuinely grasp the concept of "rectangle" beyond its textbook definition, the teacher should primarily employ questions that necessitate:

- Ans
- 1. Reciting the standard geometric properties
 - 2. Drawing varied shapes based on definitions
 - 3. Application in unfamiliar contexts
 - 4. Calculating area using the formula

Question ID : 4410091558428
Option 1 ID : 4410096156109
Option 2 ID : 4410096156110
Option 3 ID : 4410096156111
Option 4 ID : 4410096156112

Q.16 How do alternative schools usually handle class structure?

- Ans
- 1. Only indoor classroom teaching
 - 2. No interaction between students of different ages
 - 3. Flexibility in age, grades, and classroom space
 - 4. Fixed age groups and grades for all subjects

Question ID : 4410091572429
Option 1 ID : 4410096210666
Option 2 ID : 4410096210665
Option 3 ID : 4410096210667
Option 4 ID : 4410096210664

Q.17 A 7-year-old sees cartoon ads for sugary cereals and toys and quickly wants them, claiming they are "the best." What does this illustrate?

- Ans
- 1. Children make purchase choices only based on parental guidance
 - 2. Children are unaffected by ads with cartoon characters
 - 3. Children's decision-making skills are improved
 - 4. Children are influenced through emotional appeal and character association

Question ID : 4410091548452
Option 1 ID : 4410096116510
Option 2 ID : 4410096116508
Option 3 ID : 4410096116511
Option 4 ID : 4410096116509

Q.18 Which aspect is most essential when designing a school from scratch to reflect alternative education philosophies?

- Ans
- 1. Establishing traditional classroom hierarchies
 - 2. Enforcing strict uniform regulations
 - 3. Integrating community involvement in governance
 - 4. Focusing on standardized curriculum delivery

Question ID : 4410091637749
Option 1 ID : 4410096468575
Option 2 ID : 4410096468577
Option 3 ID : 4410096468574
Option 4 ID : 4410096468576

Q.19 A facilitator notices the group is losing energy. Which approach best demonstrates adaptability in method and pacing?

- Ans
- 1. Ignoring group energy
 - 2. Inserting an energiser activity
 - 3. Continuing with the same plan
 - 4. Focusing on the facilitator's opinions

Question ID : 4410091637883
Option 1 ID : 4410096469092
Option 2 ID : 4410096469090
Option 3 ID : 4410096469091
Option 4 ID : 4410096469093

Q.20 A teacher ensures fair evaluation and treats all students equally. This reflects:

- Ans
- 1. Maintaining procedural consistency in classroom management practices
 - 2. Standardizing instructional delivery to ensure uniform learning outcomes
 - 3. Adhering to professional ethical principles in assessment and interaction
 - 4. Implementing impartial administrative norms for academic accountability

Question ID : 4410091568385
Option 1 ID : 4410096194824
Option 2 ID : 4410096194826
Option 3 ID : 4410096194825
Option 4 ID : 4410096194827

Q.1 Why is it important to analyze a social studies textbook before using it for teaching?

- Ans**
- 1. To check the price of the book
 - 2. To ensure it is the thickest book available
 - 3. To ensure content and curriculum fit
 - 4. To see if it has colorful pictures

Question ID : 4410091687729
Option 1 ID : 4410096657703
Option 2 ID : 4410096657705
Option 3 ID : 4410096657702
Option 4 ID : 4410096657704

Q.2 Which aspect distinguishes social sciences from social studies?

- Ans**
- 1. Social sciences focus on theoretical analysis, whereas social studies focus on memorization.
 - 2. Social sciences are taught only at higher levels, whereas social studies are taught at primary levels.
 - 3. Social sciences are discipline-based, whereas social studies are integrated for teaching.
 - 4. Social sciences exclude real-life applications, whereas social studies include them.

Question ID : 4410091661483
Option 1 ID : 4410096559517
Option 2 ID : 4410096559518
Option 3 ID : 4410096559516
Option 4 ID : 4410096559519

Q.3 Developing scientific temper in EVS primarily involves:

- Ans**
- 1. Blind acceptance of facts
 - 2. Learning only from teachers
 - 3. Observation and inquiry
 - 4. Avoiding experimentation

Question ID : 4410091687510
Option 1 ID : 4410096656823
Option 2 ID : 4410096656824
Option 3 ID : 4410096656822
Option 4 ID : 4410096656825

Q.4 Which action best exemplifies administrative leadership in a school context?

- Ans**
- 1. Supervising sports activities
 - 2. Designing classroom lesson plans
 - 3. Establishing efficient operational systems
 - 4. Providing one-on-one tutoring

Question ID : 4410091641247
Option 1 ID : 4410096482144
Option 2 ID : 4410096482141
Option 3 ID : 4410096482142
Option 4 ID : 4410096482143

Q.5 Which describes a potential societal need for liberalization in education?

- Ans
- 1. To restrict international student exchange
 - 2. To reduce private sector involvement
 - 3. To limit technology adoption in schools
 - 4. To allow for more diverse educational opportunities

Question ID : 4410091627642
Option 1 ID : 4410096428778
Option 2 ID : 4410096428779
Option 3 ID : 4410096428780
Option 4 ID : 4410096428777

Q.6 A teacher is planning a project-based learning activity where students must investigate local history. How can textbooks best be utilized to support this activity within the teaching-learning process?

- Ans
- 1. As the only source of information for completing the project work
 - 2. Primarily for daily instruction unrelated to the project activity
 - 3. As a foundational resource for background information and key concepts
 - 4. Only for assessment purposes at the end of the learning activity

Question ID : 4410091681895
Option 1 ID : 4410096634951
Option 2 ID : 4410096634953
Option 3 ID : 4410096634950
Option 4 ID : 4410096634952

Q.7 Which tool is commonly used for lesson planning in the pedagogy of English at the primary level?

- Ans
- 1. Assessment rubric
 - 2. Syllabus outline
 - 3. Lesson plan template
 - 4. Curriculum guide

Question ID : 4410091631516
Option 1 ID : 4410096444283
Option 2 ID : 4410096444281
Option 3 ID : 4410096444280
Option 4 ID : 4410096444282

Q.8 Which of the following best evaluates the impact of including English as a compulsory subject in the curriculum on students from non-English speaking backgrounds?

- Ans
- 1. It automatically improves overall academic performance
 - 2. It has no significant impact on their learning outcomes
 - 3. It benefits only students planning higher studies abroad
 - 4. It creates opportunities and challenges in linguistic equity

Question ID : 4410091681831
Option 1 ID : 4410096634697
Option 2 ID : 4410096634694
Option 3 ID : 4410096634695
Option 4 ID : 4410096634696

Q.9 Which of the following is an example of a low cost or no cost teaching-learning material?

- Ans
- 1. Ready-made globes
 - 2. Digital projectors
 - 3. Old newspapers
 - 4. Smartboards

Question ID : 4410091687557
Option 1 ID : 4410096657013
Option 2 ID : 4410096657012
Option 3 ID : 4410096657010
Option 4 ID : 4410096657011

Q.10 Which feature best characterizes the Grammar Translation Method in English language teaching?

- Ans
- 1. Prioritizing oral fluency over accuracy
 - 2. Total avoidance of learners' mother tongue
 - 3. Use of communicative activities in class
 - 4. Emphasis on translation between languages

Question ID : 4410091611712
Option 1 ID : 4410096365697
Option 2 ID : 4410096365698
Option 3 ID : 4410096365696
Option 4 ID : 4410096365695

Q.11 Textbooks may limit learning because they:

- Ans
- 1. Promote independent material creation
 - 2. Encourage critical thinking
 - 3. Offer flexible content and methods
 - 4. Control content, methods, and assessment

Question ID : 4410091572469
Option 1 ID : 4410096210811
Option 2 ID : 4410096210808
Option 3 ID : 4410096210809
Option 4 ID : 4410096210810

Q.12 What term describes the shared values, relationships, and practices within a school environment?

- Ans
- 1. Curriculum
 - 2. Assessment
 - 3. Discipline
 - 4. School culture

Question ID : 4410091636022
Option 1 ID : 4410096462061
Option 2 ID : 4410096462064
Option 3 ID : 4410096462063
Option 4 ID : 4410096462062

Q.13 Conflict arises between a school and an NGO over project resource allocation (rigid positions taken). Which approach yields the most creative solutions?

- Ans
- 1. Establishing coercive external arbitration
 - 2. Utilizing management domination
 - 3. Engaging in interest-based negotiation
 - 4. Adopting a middle ground compromise

Question ID : 4410091558768
Option 1 ID : 4410096157464
Option 2 ID : 4410096157461
Option 3 ID : 4410096157463
Option 4 ID : 4410096157462

Q.14 Which objective best reflects a learner-centered principle in English language pedagogy?

- Ans
- 1. Prioritizing textbook completion
 - 2. Emphasizing teacher-led lectures
 - 3. Focusing on repetitive drills
 - 4. Promoting critical language use

Question ID : 4410091637815
Option 1 ID : 4410096468828
Option 2 ID : 4410096468827
Option 3 ID : 4410096468829
Option 4 ID : 4410096468826

Q.15 Which of the following approach is modelling organisational values, strengthening productive school culture, building collaborative cultures, and creating structures for participating in school decisions?

- Ans
- 1. Constructivist
 - 2. Culture centered
 - 3. Performance centered
 - 4. Mission centered

Question ID : 4410091548103
Option 1 ID : 4410096115128
Option 2 ID : 4410096115127
Option 3 ID : 4410096115126
Option 4 ID : 4410096115125

Q.16 What is one primary function of textbooks in the teaching-learning process?

- Ans
- 1. They determine teaching methods automatically
 - 2. They evaluate student performance formally
 - 3. They organize and sequence curriculum content
 - 4. They control classroom interaction patterns

Question ID : 4410091623423
Option 1 ID : 4410096412290
Option 2 ID : 4410096412289
Option 3 ID : 4410096412288
Option 4 ID : 4410096412291

Q.17 Which is a key benefit of using open-ended questions in classroom evaluation?

- Ans
- 1. They make grading faster.
 - 2. They require students to choose from given options.
 - 3. They limit students to memorized answers.
 - 4. They encourage creative and critical thinking.

Question ID : 4410091687465
Option 1 ID : 4410096656642
Option 2 ID : 4410096656644
Option 3 ID : 4410096656643
Option 4 ID : 4410096656645

Q.18 In the context of social science education, which aspect reflects the primary scope of social studies as distinguished from social sciences?

- Ans
- 1. Developing new social theories through academic research.
 - 2. Integrating disciplines to address societal issues in class.
 - 3. Conducting specialized empirical studies in isolated fields.
 - 4. Focusing exclusively on historical analysis.

Question ID : 4410091611853
Option 1 ID : 4410096366253
Option 2 ID : 4410096366251
Option 3 ID : 4410096366252
Option 4 ID : 4410096366254

Q.19 Which of the following is the primary purpose of unit planning in English language pedagogy?

- Ans
- 1. To select classroom seating arrangements
 - 2. To organize lessons around one theme
 - 3. To assign daily homework
 - 4. To assess students' final grades

Question ID : 4410091622892
Option 1 ID : 4410096410343
Option 2 ID : 4410096410340
Option 3 ID : 4410096410342
Option 4 ID : 4410096410341

Q.20 When a teacher uses simple daily items like bangles for counting or old calendars for reading to support learning, it shows a:

- Ans**
- 1. Method that depends only on costly teaching products
 - 2. Cost-saving method that makes learning easy and meaningful
 - 3. System that prevents students from active involvement
 - 4. Practice that avoids hands-on or practical materials

Question ID : 4410091548449
Option 1 ID : 4410096116498
Option 2 ID : 4410096116497
Option 3 ID : 4410096116499
Option 4 ID : 4410096116496

Section : Discipline5

Q.1 A teacher wants to review the school's science textbooks to support gender inclusivity. Which specific change would best address subtle gender bias in curriculum materials?

- Ans**
- 1. Ensuring equal representation of male and female scientists in text and images
 - 2. Expanding coverage of scientists from diverse cultural backgrounds
 - 3. Emphasizing major scientific contributions based on historical impact
 - 4. Using gender-neutral language while retaining existing visual examples

Question ID : 4410091626554
Option 1 ID : 4410096424588
Option 2 ID : 4410096424590
Option 3 ID : 4410096424591
Option 4 ID : 4410096424589

Q.2 A school is planning to implement an inclusive education policy. Which combination of practices would best ensure accurate disability identification and effective assessment for children with special needs in a culturally diverse classroom?

- Ans**
- 1. Using teacher observations and standardized tests only
 - 2. Using peer evaluation as the main assessment method
 - 3. Using multidisciplinary teams and culturally responsive tools
 - 4. Using only parental reports for identification

Question ID : 4410091683333
Option 1 ID : 4410096640258
Option 2 ID : 4410096640260
Option 3 ID : 4410096640259
Option 4 ID : 4410096640261

Q.3 Which approach begins with a theoretical discussion before practical experience?

- Ans
- 1. Inquiry approach
 - 2. Inductive approach
 - 3. Project-based approach
 - 4. Deductive approach

Question ID : 4410091633937
Option 1 ID : 4410096453840
Option 2 ID : 4410096453839
Option 3 ID : 4410096453841
Option 4 ID : 4410096453838

Q.4 A B.Ed trainee designs a lesson where students are first taught that metals generally conduct electricity. Then, they test different objects to check if they conduct electricity, including a wooden stick, a copper wire, a rubber band, and a plastic straw. What is the main goal of this lesson in terms of scientific reasoning?

- Ans
- 1. To encourage students to form new theories using inductive reasoning
 - 2. To teach students to use analogical reasoning between materials
 - 3. To help students apply deductive reasoning to verify a scientific law
 - 4. To guide students in eliminating misconceptions through trial and error

Question ID : 4410091633882
Option 1 ID : 4410096453619
Option 2 ID : 4410096453620
Option 3 ID : 4410096453618
Option 4 ID : 4410096453621

Q.5 How does fun mathematics influence the learning environment?

- Ans
- 1. It fosters a close relationship between teachers and students without pressure
 - 2. It imposes strict discipline on learners
 - 3. It eliminates the use of games in learning
 - 4. It encourages competition among students

Question ID : 4410091639246
Option 1 ID : 4410096474545
Option 2 ID : 4410096474548
Option 3 ID : 4410096474547
Option 4 ID : 4410096474546

Q.6 What is a significant outcome for students participating in Eco-Clubs?

- Ans
- 1. Enhanced abilities in competitive exams.
 - 2. Improved physical fitness.
 - 3. Better understanding of global politics.
 - 4. Positive shifts in attitudes towards the environment.

Question ID : 4410091639543
Option 1 ID : 4410096475718
Option 2 ID : 4410096475719
Option 3 ID : 4410096475720
Option 4 ID : 4410096475717

Q.7 In a lesson on number types, a teacher asks students to classify the following: 0, 2, -1, and 1/2. Which classification accurately matches each number according to standard school curricula?

- Ans
- 1. 0 is a whole number, 2 is a natural number, -1 is an integer, 1/2 is a rational number
 - 2. 0 is a rational number, 2 is irrational, -1 is a whole number, 1/2 is an integer
 - 3. 0 is a natural number, 2 is a rational number, -1 is a real number, 1/2 is an irrational number
 - 4. 0 is an integer, 2 is a whole number, -1 is irrational, 1/2 is a natural number

Question ID : 4410091633500
Option 1 ID : 4410096452112
Option 2 ID : 4410096452111
Option 3 ID : 4410096452113
Option 4 ID : 4410096452110

Q.8 A teacher asks students to listen to a short story and then discuss its main ideas in pairs. Which LSRW skills are mainly developed through this activity?

- Ans
- 1. Speaking and writing skills together
 - 2. Reading and listening skills together
 - 3. Listening and memorisation skills together
 - 4. Listening and speaking skills together

Question ID : 4410091690755
Option 1 ID : 4410096669194
Option 2 ID : 4410096669193
Option 3 ID : 4410096669195
Option 4 ID : 4410096669192

Q.9 Which evaluation technique helps teachers check students' pronunciation in language education?

- Ans 1. Recitation
 2. Painting
 3. Building models
 4. Calculating sums

Question ID : 4410091639053
Option 1 ID : 4410096473785
Option 2 ID : 4410096473786
Option 3 ID : 4410096473788
Option 4 ID : 4410096473787

Q.10 Which of the following best illustrates the use of three-dimensional visual aids in teaching?

- Ans 1. Slide
 2. Model
 3. Magazine
 4. Radio broadcast

Question ID : 4410091691249
Option 1 ID : 4410096671197
Option 2 ID : 4410096671194
Option 3 ID : 4410096671196
Option 4 ID : 4410096671195

Q.11 What role do social interactions play in constructivist mathematics learning?

- Ans 1. They force students to memorize more facts
 2. They are not considered important in mathematics learning
 3. They help shape individual interpretations of observations
 4. They limit students' understanding of concepts

Question ID : 4410091633957
Option 1 ID : 4410096453921
Option 2 ID : 4410096453919
Option 3 ID : 4410096453918
Option 4 ID : 4410096453920

Q.12 What educational interventions are suggested to address the effects of dyslexia?

- Ans 1. Information technology and individual counselling
 2. Physical coordination exercises
 3. Group learning and memorization techniques
 4. Conventional classroom teaching methods

Question ID : 4410091639908
Option 1 ID : 4410096476839
Option 2 ID : 4410096476841
Option 3 ID : 4410096476838
Option 4 ID : 4410096476840

Q.13 Which of the following is a common activity organized by a science club in schools?

- Ans**
- 1. Preparing ecological displays
 - 2. Arranging expert lectures
 - 3. Organizing quiz competitions
 - 4. Conducting science experiments

Question ID : 4410091687988
Option 1 ID : 4410096658740
Option 2 ID : 4410096658741
Option 3 ID : 4410096658739
Option 4 ID : 4410096658738

Q.14 Which classroom activity promotes diversity and equality?

- Ans**
- 1. Giving key leadership responsibilities only to socially privileged learners
 - 2. Promoting classroom communication using just one dominant language
 - 3. Celebrating diverse cultural events and inviting active student participation
 - 4. Using learning materials that highlight only a single gender or community

Question ID : 4410091555779
Option 1 ID : 4410096145670
Option 2 ID : 4410096145671
Option 3 ID : 4410096145669
Option 4 ID : 4410096145672

Q.15 A mathematics teacher encourages students to discuss their strategies for solving a contextual problem in small groups and reflect on different approaches. This teaching method best supports which constructivist principle?

- Ans**
- 1. Immediate grading of answers
 - 2. Individual rote practice
 - 3. Teacher explanation only
 - 4. Peer dialogue and reflection

Question ID : 4410091619085
Option 1 ID : 4410096395215
Option 2 ID : 4410096395214
Option 3 ID : 4410096395212
Option 4 ID : 4410096395213

Q.16 A school provides subsidized transport, private sanitation, and free remedial classes to improve girl attendance and retention. This primarily addresses which type of need?

- Ans
- 1. Strategic gender needs
 - 2. Practical gender needs
 - 3. Relational gender needs
 - 4. Institutional gender needs

Question ID : 4410091560379
Option 1 ID : 4410096163643
Option 2 ID : 4410096163645
Option 3 ID : 4410096163642
Option 4 ID : 4410096163644

Q.17 Which approach best enables Indian classrooms to address both gender and socioeconomic inequality while promoting inclusivity?

- Ans
- 1. Emphasizing competitive academic rankings
 - 2. Enforcing uniform language policies strictly
 - 3. Limiting parental involvement in planning
 - 4. Implementing differentiated instruction strategies

Question ID : 4410091663071
Option 1 ID : 4410096565579
Option 2 ID : 4410096565578
Option 3 ID : 4410096565580
Option 4 ID : 4410096565577

Q.18 A language teacher is designing a lesson plan that equally integrates listening, speaking, reading, and writing activities for a group of students learning a new language. Which instructional sequence best exemplifies an effective approach to incorporating all four LSRW skills in a communicative classroom environment?

- Ans
- 1. Students read aloud, write sentences, listen to instructions, and draw a picture
 - 2. Students write a dialogue, speak lines, listen to corrections, and answer grammar questions
 - 3. Students read silently, listen to news, answer questions orally, and draw scenes
 - 4. Students listen to a short story, discuss its content, read a related article, and compose a summary

Question ID : 4410091615294
Option 1 ID : 4410096380042
Option 2 ID : 4410096380043
Option 3 ID : 4410096380044
Option 4 ID : 4410096380041

Q.19 Which aspect of curriculum design can unintentionally reinforce gender stereotypes among students?

- Ans
- 1. Giving equal opportunities for boys and girls to participate in sports
 - 2. Highlighting achievements of women from diverse backgrounds
 - 3. Including stories in textbooks that depict only boys as leaders
 - 4. Balancing examples of male and female scientists in science lessons

Question ID : 4410091624292
Option 1 ID : 4410096415700
Option 2 ID : 4410096415701
Option 3 ID : 4410096415699
Option 4 ID : 4410096415702

Q.20 Which of the following disorders is characterized by difficulty in muscle control, which causes problems with movement and coordination, language and speech, and can affect learning?

- Ans
- 1. Dyslexia
 - 2. Dyscalculia
 - 3. Dyspraxia
 - 4. Dysgraphia

Question ID : 4410091548355
Option 1 ID : 4410096116130
Option 2 ID : 4410096116131
Option 3 ID : 4410096116129
Option 4 ID : 4410096116132