



GOVT. OF NCT OF DELHI
 Delhi Subordinate Services Selection Board
 FC-18, Institutional Area, Karkardooma, Delhi – 110092.
www.dsssb.delhigovt.nic.in

Participant ID	2020111950
Participant Name	[REDACTED]
Test Center Name	Aadarsh Pariksha Kendra CENTER A - Gate No 1 - Noida Sector 64
Test Date	26/03/2026
Test Time	1:00 PM - 3:00 PM
Subject	Assistant Teacher Primary

Section : General Intelligence and Reasoning Ability

Q.1 Each of A, B, C, D, I, J and K has an exam on a different day of a week starting from Monday and ending on Sunday of the same week. K has exam on Thursday. J has exam two days before K. Only four people have exams between D and J. A has exam on one of the days after J. B has exam on the day immediately before I. D has exam after J. How many people have exams between I and A?

- Ans
- 1. One
 - 2. Three
 - 3. Four
 - 4. Two

Question ID : 4410091614372
 Option 1 ID : 4410096376305
 Option 2 ID : 4410096376307
 Option 3 ID : 4410096376308
 Option 4 ID : 4410096376306

Q.2 C is the brother of O. R is the sister of T. Y is the son of T. T is the wife of O. How is C related to R?

- Ans
- 1. Sister's husband's brother
 - 2. Sister's husband's father
 - 3. Husband's brother
 - 4. Husband's father

Question ID : 4410091618981
 Option 1 ID : 4410096394796
 Option 2 ID : 4410096394797
 Option 3 ID : 4410096394798
 Option 4 ID : 4410096394799

Adda247

Test Prime

ALL EXAMS, ONE SUBSCRIPTION



1,00,000+
Mock Tests



**Personalised
Report Card**



**Unlimited
Re-Attempt**



600+
Exam Covered



25,000+ Previous
Year Papers



500%
Refund



ATTEMPT FREE MOCK NOW

Q.3 Each vowel in the word RACTORS is changed to the letter immediately following it in the English alphabetical order AND each consonant is changed to the letter immediately preceding it in the English alphabetical order. How many letters will appear exactly twice in the group of letters thus formed?4219

- Ans
- 1. Three
 - 2. Two
 - 3. None
 - 4. One

Question ID : 441009790333
Option 1 ID : 4410093115334
Option 2 ID : 4410093115333
Option 3 ID : 4410093115331
Option 4 ID : 4410093115332

Q.4 Below are given two sets of numbers. In each set of numbers, a certain mathematical operation on first number results in the second number. Similarly, certain mathematical operation on second number results in the third number and so on. Which of the given options follows the same set of operations as in question? (NOTE : Operations should be performed on the whole numbers, without breaking down the numbers into its constituent digits. E.g. 13 – Operations on 13 such as adding / subtracting /multiplying etc. to 13 can be performed. Breaking down 13 into 1 and 3 and then performing mathematical operations on 1 and 3 is not allowed.)
17 - 27 - 162 - 158
21 - 31 - 186 - 182

- Ans
- 1. 18 - 28 - 224 - 221
 - 2. 11 - 12 - 72 - 69
 - 3. 46 - 55 - 275 - 271
 - 4. 7 - 17 - 102 - 98

Question ID : 441009528654
Option 1 ID : 4410092070023
Option 2 ID : 4410092070021
Option 3 ID : 4410092070022
Option 4 ID : 4410092070020

Q.5 Refer to the following series and answer the question (all numbers are single digit numbers only).

(Left) 6 2 1 5 7 3 7 5 9 8 5 3 7 4 5 2 4 8 4 3 6 9 4 2 1 5 1 (Right)

How many such odd digits are there each of which is immediately preceded by an even digit and also immediately followed by an odd digit?

9787

- Ans
- 1. 2
 - 2. 3
 - 3. 4
 - 4. 5

Question ID : 441009783649
 Option 1 ID : 4410093088599
 Option 2 ID : 4410093088600
 Option 3 ID : 4410093088601
 Option 4 ID : 4410093088602

Q.6 Each vowel in the word AXILLARY is changed to the second letter following it in the English alphabetical order and each consonant is changed to the letter immediately preceding it in the English alphabetical order. Which of the following letters will appear exactly twice in the new group of letters thus formed?

- Ans
- 1. Q
 - 2. K
 - 3. W
 - 4. C

Question ID : 441009216470
 Option 1 ID : 441009849922
 Option 2 ID : 441009849920
 Option 3 ID : 441009849921
 Option 4 ID : 441009849919

Q.7 In a certain code language, 'FEAT' is coded as '8931' and 'TEAM' is coded as '6931'. What is the code for 'M' in the given code language?

- Ans
- 1. 1
 - 2. 3
 - 3. 6
 - 4. 8

Question ID : 4410091518949
 Option 1 ID : 4410095999053
 Option 2 ID : 4410095999052
 Option 3 ID : 4410095999050
 Option 4 ID : 4410095999051

Q.8 Refer to the following series and answer the question
(Left) O N T L I K E I T T H E N M A K E M E A N O T H E R
(Right)
If all the consonants are dropped from the series, which letter will be third from the right?

5513

- Ans
- 1. I
 - 2. A
 - 3. E
 - 4. O

Question ID : 441009779456
Option 1 ID : 4410093071830
Option 2 ID : 4410093071827
Option 3 ID : 4410093071828
Option 4 ID : 4410093071829

Q.9 What should come in place of ? in the given series based on the English alphabetical order?
V J I P A O N U F T S Z K Y X E ?

- Ans
- 1. P D C F
 - 2. P D C J
 - 3. P D E R
 - 4. P L K I

Question ID : 4410091618922
Option 1 ID : 4410096394561
Option 2 ID : 4410096394560
Option 3 ID : 4410096394563
Option 4 ID : 4410096394562

Q.10 What will come in the place of '?' in the following equation, if '+' and '-' are interchanged and 'x' and '÷' are interchanged?
 $380 \times 19 - 16 \div 5 + 28 = ?$

- Ans
- 1. 72
 - 2. 68
 - 3. 76
 - 4. 80

Question ID : 4410091528089
Option 1 ID : 4410096035550
Option 2 ID : 4410096035549
Option 3 ID : 4410096035551
Option 4 ID : 4410096035552

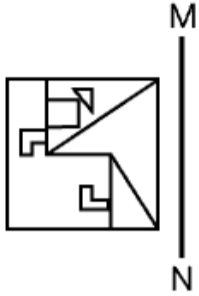
Q.11 If 2 is added to each odd digit and 1 is subtracted from each even digit in the number 1743628, how many digits will appear more than once in the new number thus formed?

- Ans
- 1. One
 - 2. None
 - 3. Two
 - 4. Three

Question ID : 441009348534
Option 1 ID : 4410091360455
Option 2 ID : 4410091360454
Option 3 ID : 4410091360456
Option 4 ID : 4410091360457

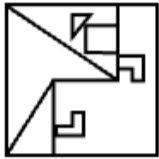


Q.12 Select the correct mirror image of the given figure when the mirror is placed at MN as shown below.

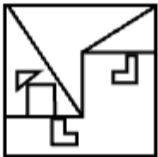


Ans

✓ 1.



✗ 2.



✗ 3.



✗ 4.



Question ID : 4410091524714
 Option 1 ID : 4410096022064
 Option 2 ID : 4410096022066
 Option 3 ID : 4410096022063
 Option 4 ID : 4410096022065

Q.13 Each of H, U, S, B, A, N and D has an exam on a different day of the week starting from Monday and ending on Sunday of the same week. Only three people have exams between N and U. U has an exam on the last day of the week. Only one person has an exam between H and S. D has an exam immediately the day before A. B doesn't have an exam on Friday. How many people have exam(s) after B?

- Ans
- 1. Six
 - 2. Three
 - 3. Four
 - 4. Five

Question ID : 4410091518858
 Option 1 ID : 4410095998710
 Option 2 ID : 4410095998713
 Option 3 ID : 4410095998712
 Option 4 ID : 4410095998711

Q.14 What should come in place of the question mark (?) in the given series?
 5, 11, 23, 47, 95, ?

- Ans
- 1. 193
 - 2. 192
 - 3. 194
 - 4. 191

Question ID : 441009216185
 Option 1 ID : 441009848781
 Option 2 ID : 441009848780
 Option 3 ID : 441009848782
 Option 4 ID : 441009848779

Q.15 BYVX is related to ZWTV in a certain way based on the English alphabetical order. In the same way, NKHJ is related to LIFH. To which of the following is UROQ related, following the same logic?5090

- Ans
- 1. SPMO
 - 2. SQLN
 - 3. SPLO
 - 4. SOLO

Question ID : 441009779053
 Option 1 ID : 4410093070215
 Option 2 ID : 4410093070216
 Option 3 ID : 4410093070218
 Option 4 ID : 4410093070217

Q.16 Based on the English alphabetical order, three of the following four letter-clusters are alike in a certain way and thus form a group. Which letter-cluster DOES NOT belong to that group?
(Note: The odd one out is not based on the number of consonants/vowels or their position in the letter-cluster.)

- Ans
- 1. EDH
 - 2. RRU
 - 3. AZD
 - 4. DCG

Question ID : 441009764843
Option 1 ID : 4410093013368
Option 2 ID : 4410093013365
Option 3 ID : 4410093013367
Option 4 ID : 4410093013366

Q.17 Based on the English alphabetical order, three of the following four letter-cluster pairs are alike in a certain way and thus form a group. Which is the one that does not belong to that group?
(Note: The odd one out is not based on the number of consonants/vowels or their position in the letter cluster.)⁴⁰⁹²

- Ans
- 1. IK - KI
 - 2. EG - GE
 - 3. XY - YX
 - 4. CE - EC

Question ID : 441009790206
Option 1 ID : 4410093114825
Option 2 ID : 4410093114824
Option 3 ID : 4410093114823
Option 4 ID : 4410093114826

Q.18 Seven people A, B, C, D, E, F and G are sitting in a straight row, facing north. G sits third from the left end of the row. F sits to the immediate right of G. C sits third to right of F. E sits to the immediate left of A. E does not sit at an extreme end of the row. Only one person sits between G and B. Who sits second from the left end of the row?

- Ans
- 1. C
 - 2. B
 - 3. A
 - 4. D

Question ID : 441009148042
Option 1 ID : 441009588037
Option 2 ID : 441009588039
Option 3 ID : 441009588038
Option 4 ID : 441009588040

Q.19 If the water source is placed along M-N, as shown in the figure, which of the given options will be the water reflection of the given figure?



Ans

✓ 1.



✗ 2.



✗ 3.



✗ 4.



Question ID : 441009864927
 Option 1 ID : 4410093412810
 Option 2 ID : 4410093412811
 Option 3 ID : 4410093412808
 Option 4 ID : 4410093412809

Q.20 In a row of 55 students facing North, Malika is 12th from the left end. If Raza is 21st to the right of Malika, what is Raza's position from the right end of the row?

Ans ✗ 1. 22nd

✗ 2. 24th

✗ 3. 21st

✓ 4. 23rd

Question ID : 4410091518825
 Option 1 ID : 4410095998579
 Option 2 ID : 4410095998581
 Option 3 ID : 4410095998578
 Option 4 ID : 4410095998580

Q.1 Where did the French East India Company establish its first factory in 1668 AD?

- Ans
- 1. Masulipattanam
 - 2. Surat
 - 3. Visakhapatnam
 - 4. Patna

Question ID : 441009105918
Option 1 ID : 441009421728
Option 2 ID : 441009421725
Option 3 ID : 441009421727
Option 4 ID : 441009421726

Q.2 The Indian Universities Act of 1904, enforcing stricter oversight over Indian higher learning institutions, was introduced by:

- Ans
- 1. Lord Curzon
 - 2. Lord Ripon
 - 3. Lord Canning
 - 4. Lord Hardinge

Question ID : 4410091551304
Option 1 ID : 4410096127535
Option 2 ID : 4410096127536
Option 3 ID : 4410096127538
Option 4 ID : 4410096127537

Q.3 Which organization arranged the first Shipbuilding, Indigenisation and IT Conference in November 2025?

- Ans
- 1. Indian Coast Guard
 - 2. Indian Navy
 - 3. Defence Research and Development Organisation
 - 4. Hindustan Aeronautics Limited

Question ID : 4410091564526
Option 1 ID : 4410096179678
Option 2 ID : 4410096179679
Option 3 ID : 4410096179680
Option 4 ID : 4410096179677

Q.4 A commodity becomes final good when _____.

- (A) it passes out of economic flow
(B) it becomes ready for the next process

Select the correct option.

- Ans 1. Both (A) and (B) are correct
 2. Only (B) is correct
 3. Both (A) and (B) are INCORRECT
 4. Only (A) is correct

Question ID : 441009627672
Option 1 ID : 4410092464840
Option 2 ID : 4410092464842
Option 3 ID : 4410092464843
Option 4 ID : 4410092464841

Q.5 What is the name of the joint military exercise conducted between India and Japan in February–March 2025?

- Ans 1. YUDH ABHYAS
 2. SURYA KIRAN
 3. DHARMA GUARDIAN
 4. GARUDA SHAKTI

Question ID : 441009251597
Option 1 ID : 441009980322
Option 2 ID : 441009980325
Option 3 ID : 441009980324
Option 4 ID : 441009980323

Q.6 Which transport system in India is best suited for the movement of perishable goods and urgent cargo?

- Ans 1. Railways
 2. Airways
 3. Inland waterways
 4. Roadways

Question ID : 441009371996
Option 1 ID : 4410091453740
Option 2 ID : 4410091453742
Option 3 ID : 4410091453743
Option 4 ID : 4410091453741

Q.7 What is the primary constitutional protection granted by Article 31B regarding the Ninth Schedule?

- Ans
- 1. It allows the temporary suspension of Fundamental Rights during emergency provisions.
 - 2. It safeguards Acts in the 9th Schedule from being declared void for violating Fundamental Rights.
 - 3. It bars judicial review of all future amendments made to Part III of the Constitution.
 - 4. It empowers High Courts to validate laws repugnant to the Directive Principles.

Question ID : 441009671858
Option 1 ID : 4410092641529
Option 2 ID : 4410092641527
Option 3 ID : 4410092641526
Option 4 ID : 4410092641528

Q.8 Who said, 'The real progress of India did not mean simply the growth and expansion of industrial urban centers but mainly the development of the villages.'?

- Ans
- 1. Rabindranath Tagore
 - 2. Mahatma Gandhi
 - 3. Subhash Chandra Bose
 - 4. Jawaharlal Nehru

Question ID : 441009626485
Option 1 ID : 4410092460093
Option 2 ID : 4410092460095
Option 3 ID : 4410092460092
Option 4 ID : 4410092460094

Q.9 Where was the World Energy Congress organised in 2024?

- Ans
- 1. Dubai
 - 2. London
 - 3. Brussels
 - 4. Rotterdam

Question ID : 441009217389
Option 1 ID : 441009853513
Option 2 ID : 441009853512
Option 3 ID : 441009853514
Option 4 ID : 441009853515

Q.10 A homogeneous mixtures of two or more than two components is called a solution. The component that is present in the largest quantity in a solution is generally known as:

- Ans
- 1. solute
 - 2. vapour
 - 3. solvent
 - 4. precipitate

Question ID : 441009615911
Option 1 ID : 4410092417813
Option 2 ID : 4410092417816
Option 3 ID : 4410092417814
Option 4 ID : 4410092417815

Q.11 King Abdullah II of Jordan appointed a new Prime Minister to his country. His name is:

- Ans
- 1. Haditha Jamal
 - 2. Khalid Musa
 - 3. Bishar al Khashawneh
 - 4. Jafar Hassan

Question ID : 441009217407
Option 1 ID : 441009853587
Option 2 ID : 441009853585
Option 3 ID : 441009853584
Option 4 ID : 441009853586

Q.12 According to the Indian Constitution, the powers and functions of a Gram Sabha at the village level are determined by:

- Ans
- 1. The Election Commission of India
 - 2. The Legislature of the respective State by law
 - 3. The Governor, through public notification
 - 4. The Union Parliament

Question ID : 441009672028
Option 1 ID : 4410092642211
Option 2 ID : 4410092642213
Option 3 ID : 4410092642212
Option 4 ID : 4410092642210

Q.13 Which of the following economic reforms in India aimed at liberalising the industrial sector and reducing the governmental control?

- Ans
- 1. Industrial Policy, 1948
 - 2. New Economic Policy, 1991
 - 3. Mahatma Gandhi National Rural Employment Guarantee Act (MGNREGA)
 - 4. Demonetisation

Question ID : 441009638100
Option 1 ID : 4410092506545
Option 2 ID : 4410092506544
Option 3 ID : 4410092506546
Option 4 ID : 4410092506543

Q.14 Which organization launched the enhanced certificate of origin (eCoO) 2.0 system in January 2025?

- Ans
- 1. Directorate General of Foreign Trade
 - 2. Reserve Bank of India
 - 3. Export Promotion Council
 - 4. Federation of Indian Export Organization

Question ID : 441009195771
Option 1 ID : 441009770913
Option 2 ID : 441009770911
Option 3 ID : 441009770912
Option 4 ID : 441009770914

Q.15 The Brihadeeswarar Temple at Thanjavur, known for its towering vimana, was built under which dynasty?

- Ans
- 1. Pallava
 - 2. Vijayanagara
 - 3. Chola
 - 4. Hoysala

Question ID : 441009749142
Option 1 ID : 4410092950396
Option 2 ID : 4410092950399
Option 3 ID : 4410092950397
Option 4 ID : 4410092950398

Q.16 Which of the following statements CORRECTLY reflects the true constitutional status and function of the Directive Principles of State Policy (DPSPs) in India?

- Ans
- 1. They represent the fundamental obligations of citizens in a democratic polity and are enforceable in courts.
 - 2. They are non-justiciable but act as essential guidelines for the state in ensuring socio-economic justice.
 - 3. They are judicially enforceable, similar to Fundamental Rights, and override conflicting laws.
 - 4. They are temporary provisions adopted by Parliament to be repealed after the implementation of the first Five-Year Plan

Question ID : 441009671629
Option 1 ID : 4410092640601
Option 2 ID : 4410092640602
Option 3 ID : 4410092640600
Option 4 ID : 4410092640603

Q.17 Which department maintains land use records in India?

- Ans
- 1. Ministry of Environment
 - 2. Forest Survey of India
 - 3. Planning Commission
 - 4. Land Revenue Department

Question ID : 441009209961
Option 1 ID : 441009825011
Option 2 ID : 441009825014
Option 3 ID : 441009825013
Option 4 ID : 441009825012

Q.18 turmeric gives red color when it reacts with _____

- Ans
- 1. Base
 - 2. Salt
 - 3. Water
 - 4. Acid

Question ID : 441009624552
Option 1 ID : 4410092452340
Option 2 ID : 4410092452342
Option 3 ID : 4410092452343
Option 4 ID : 4410092452341

Q.19 Who among the following won the Grammy Award 2025 for the album Triveni under the Best New Age, Ambient, or Chant Album category?

- Ans
- 1. Anoushka Shankar
 - 2. A. R. Rahman
 - 3. Chandrika Krishnamoorthy Tandon
 - 4. Shankar Mahadevan

Question ID : 441009608015
Option 1 ID : 4410092387178
Option 2 ID : 4410092387180
Option 3 ID : 4410092387177
Option 4 ID : 4410092387179

Q.20 Which of the following Muslim groups denoted the scholarly religious class that supervised spiritual affairs and interpreted sacred rules while also handling judicial roles as Qazis?

- Ans
- 1. Wizarat
 - 2. Nobles
 - 3. Ulema
 - 4. The Sepoys

Question ID : 4410091551400
Option 1 ID : 4410096127966
Option 2 ID : 4410096127965
Option 3 ID : 4410096127963
Option 4 ID : 4410096127964

Section : Arithmetical and Numerical Ability

Q.1 Two trains are running in opposite directions with the same speed. The length of each train is 240 m and they cross each other in 16 seconds. Find the speed of each train.

- Ans
- 1. 54 km/hour
 - 2. 36 km/hour
 - 3. 63 km/hour
 - 4. 49 km/hour

Question ID : 4410099113
Option 1 ID : 44100936206
Option 2 ID : 44100936204
Option 3 ID : 44100936207
Option 4 ID : 44100936205

Q.2 The sum of 10 numbers is 636. Find their average.

- Ans
- 1. 64.6
 - 2. 61.6
 - 3. 62.6
 - 4. 63.6

Question ID : 441009581973
Option 1 ID : 4410092283020
Option 2 ID : 4410092283021
Option 3 ID : 4410092283019
Option 4 ID : 4410092283018

Q.3 Simplify: $\frac{\sqrt[3]{5832}}{\sqrt[4]{256}} \times \frac{2}{54} \times 168$

- Ans
- 1. 28
 - 2. 20
 - 3. 31
 - 4. 26

Question ID : 441009575756
Option 1 ID : 4410092258144
Option 2 ID : 4410092258147
Option 3 ID : 4410092258145
Option 4 ID : 4410092258146

Q.4 At a health club, 60% of the members are women and 40% of the members are men. If the average age of the men is 67 years and the average age of the women is 53 years, what is the average age (in years) of all the members?

- Ans
- 1. 69.3
 - 2. 58.6
 - 3. 52.5
 - 4. 59.8

Question ID : 441009539448
Option 1 ID : 4410092113190
Option 2 ID : 4410092113188
Option 3 ID : 4410092113189
Option 4 ID : 4410092113191

Q.5 The mean proportional of 8 and 0.72 is ____.

- Ans
- 1. 2.2
 - 2. 2.8
 - 3. 2.4
 - 4. 2.1

Question ID : 441009986482
Option 1 ID : 4410093898219
Option 2 ID : 4410093898218
Option 3 ID : 4410093898220
Option 4 ID : 4410093898217

Q.6 Two taps can fill a cistern in 2 hours and 32 hours. A third tap can empty it in 2 hours. How long (in hours) will it take to fill the empty cistern, if all of them are opened together?

- Ans
- 1. 35
 - 2. 34
 - 3. 32
 - 4. 33

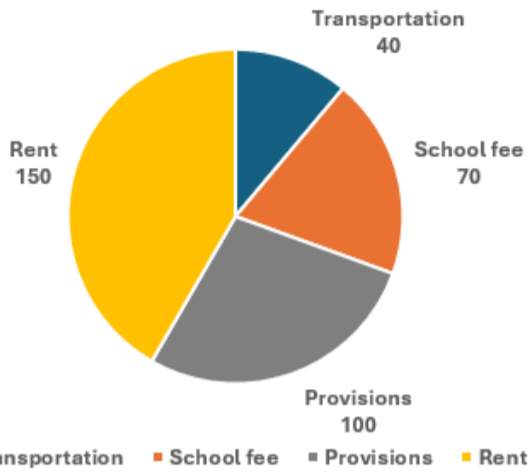
Question ID : 441009194613
Option 1 ID : 441009766402
Option 2 ID : 441009766401
Option 3 ID : 441009766399
Option 4 ID : 441009766400

Q.7 A rectangular tin sheet is 8 cm long and 17 cm wide. It is rolled along its length to form a cylinder, with opposite edges just touching each other. Find the volume (in cm^3) of the cylinder.

- Ans
- 1. $\frac{275}{\pi}$
 - 2. $\frac{271}{\pi}$
 - 3. $\frac{270}{\pi}$
 - 4. $\frac{272}{\pi}$

Question ID : 441009622152
Option 1 ID : 4410092442741
Option 2 ID : 4410092442742
Option 3 ID : 4410092442743
Option 4 ID : 4410092442740

Q.8 The following pie chart shows the expenditure of a family on various aspects in terms of degrees.



If the income of the family is ₹1,08,000 per month, then what is the amount spent for provisions?

- Ans
- 1. ₹45,000
 - 2. ₹12,000
 - 3. ₹21,000
 - 4. ₹30,000

Question ID : 441009364141
 Option 1 ID : 4410091422814
 Option 2 ID : 4410091422816
 Option 3 ID : 4410091422815
 Option 4 ID : 4410091422817

Q.9 If $48 + \sqrt{0.0615 + x} = 48.25$, then find the value of x.

- Ans
- 1. 0.1
 - 2. 0.01
 - 3. 1
 - 4. 0.001

Question ID : 441009209541
 Option 1 ID : 441009823448
 Option 2 ID : 441009823449
 Option 3 ID : 441009823447
 Option 4 ID : 441009823450

Q.10 Gopal has two grandsons, Akshay and Atul. 15-year-old Akshay gets some money from Gopal's wealth and 16-year-old Atul gets the rest of the money. But Akshay and Atul will get the money only when they turn 24 years old. Till then the money will be kept in a bank earning interest at the rate of 8% per annum, compounded annually. When both turn 24, they receive the same amounts. If the total money Gopal had was ₹24,700, how much money (in ₹) did Gopal initially give to Atul?

- Ans 1. 12,825
 2. 11,875
 3. 11,625
 4. 13,175

Question ID : 441009543434
Option 1 ID : 4410092129132
Option 2 ID : 4410092129133
Option 3 ID : 4410092129135
Option 4 ID : 4410092129134

Q.11 Komal and Minal started a partnership business investing some amount in the ratio of 2 : 7. Kinjal joined them after six months with an amount equal to that of Minal. In what ratio should the profit at the end of one year be distributed among Komal, Minal and Kinjal?

- Ans 1. 7 : 10 : 13
 2. 4 : 14 : 7
 3. 5 : 15 : 8
 4. 13 : 25 : 2

Question ID : 441009899591
Option 1 ID : 4410093552435
Option 2 ID : 4410093552434
Option 3 ID : 4410093552436
Option 4 ID : 4410093552437

Q.12 A circular race of 3000 m, Gudu and Sohan start from the same point. Find when will they meet again for the first time (in minutes) on

- Ans 1. 5
 2. 4
 3. 3
 4. 2

Question ID : 44100920095
Option 1 ID : 44100980112
Option 2 ID : 44100980111
Option 3 ID : 44100980110
Option 4 ID : 44100980109

Q.13 A clothing store has a marked price of \$150 for a winter coat. During a clearance sale, the store offers a 30% discount on the coat. After the sale, the store realises they still have excess inventory and provides an additional discount of 10% on the new selling price. What is the final selling price of the winter coat after both discounts are applied?

- Ans
- 1. \$90.80
 - 2. \$78.50
 - 3. \$84.40
 - 4. \$94.50

Question ID : 441009208816
Option 1 ID : 441009820550
Option 2 ID : 441009820549
Option 3 ID : 441009820548
Option 4 ID : 441009820547

Q.14 What sum (in ₹) will earn a simple interest of ₹1680 in 3 years at 4% per year rate of interest?¹³⁴⁴

- Ans
- 1. 201.6
 - 2. 7000
 - 3. 28000
 - 4. 14000

Question ID : 441009852626
Option 1 ID : 4410093363479
Option 2 ID : 4410093363477
Option 3 ID : 4410093363478
Option 4 ID : 4410093363476

Q.15 A piece of canvas completely covers a spherical ball. How many circles, each with a radius half the radius of the sphere, can be cut from this canvas?

- Ans
- 1. 16
 - 2. 8
 - 3. 9
 - 4. 4

Question ID : 44100917738
Option 1 ID : 44100970787
Option 2 ID : 44100970790
Option 3 ID : 44100970789
Option 4 ID : 44100970788

Q.16 Two taps can fill a cistern in 3 hours and 27 hours, respectively. A third tap can empty it in 3 hours. How long (in hours) will it take to fill two-third of the empty cistern, if all of them are opened together?³⁹²⁴

- Ans
- 1. 36
 - 2. 72
 - 3. 54
 - 4. 18

Question ID : 441009897237
Option 1 ID : 4410093543019
Option 2 ID : 4410093543021
Option 3 ID : 4410093543020
Option 4 ID : 4410093543018

Q.17 A shopkeeper professes to sell his goods at a 15% loss but uses a false balance and gains 55%. The actual weight (rounded off to one decimal place) he uses for 1 kg is:³⁹³⁸

- Ans
- 1. 550.0 gm
 - 2. 548.4 gm
 - 3. 552.1 gm
 - 4. 553.7 gm

Question ID : 441009561349
Option 1 ID : 4410092200665
Option 2 ID : 4410092200663
Option 3 ID : 4410092200664
Option 4 ID : 4410092200666

Q.18 The radius of the base of a right circular cone is 10 cm and its slant height is 70 cm. Find the curved surface area of the cone.

$$\left(\text{Use } \pi = \frac{22}{7} \right)$$

- Ans
- 1. 1500 cm²
 - 2. 2200 cm²
 - 3. 2000 cm²
 - 4. 1200 cm²

Question ID : 441009621337
Option 1 ID : 4410092439482
Option 2 ID : 4410092439483
Option 3 ID : 4410092439481
Option 4 ID : 4410092439480

Q.19 A shopkeeper bought an article for ₹1,200. At what price (in ₹) should he sell the article to make a 28% profit?

- Ans
- 1. 1,548
 - 2. 864
 - 3. 1,536
 - 4. 1,524

Question ID : 441009191044
Option 1 ID : 441009752978
Option 2 ID : 441009752977
Option 3 ID : 441009752976
Option 4 ID : 441009752979

Q.20 If 45% of a number exceeds 25% of it by 18, then the number is: 5680

- Ans
- 1. 90
 - 2. 130
 - 3. 70
 - 4. 110

Question ID : 441009856962
Option 1 ID : 4410093380820
Option 2 ID : 4410093380821
Option 3 ID : 4410093380823
Option 4 ID : 4410093380822

Section : English Language and Comprehension

Q.1 Select the most appropriate article to fill in the blank. If no article is needed, select 'No article required'.

The resource person delivered _____ hour-long lecture today.

- Ans
- 1. an
 - 2. No article required
 - 3. a
 - 4. the

Question ID : 441009498010
Option 1 ID : 4410091947253
Option 2 ID : 4410091947255
Option 3 ID : 4410091947254
Option 4 ID : 4410091947252

Q.2 Select the most appropriate option to fill in the blank.

The lion roared fiercely, but _____ zookeeper remained calm.

- Ans
- 1. few
 - 2. the
 - 3. a
 - 4. an

Question ID : 441009484087
Option 1 ID : 4410091891700
Option 2 ID : 4410091891697
Option 3 ID : 4410091891698
Option 4 ID : 4410091891699

Q.3 Select the most appropriate option to fill in the blank.

The artist was inspired ____ the natural beauty of the landscape around her, which influenced much of her work.

- Ans
- 1. by
 - 2. with
 - 3. on
 - 4. through

Question ID : 441009495290
Option 1 ID : 4410091936373
Option 2 ID : 4410091936372
Option 3 ID : 4410091936375
Option 4 ID : 4410091936374

Q.4 Select the option that can be used as a one-word substitute for the given group of words.

A collection of selected passages that is designed to ease learning of a language

- Ans
- 1. Anthology
 - 2. Chrestomathy
 - 3. Excerpt
 - 4. Primer

Question ID : 441009828190
Option 1 ID : 4410093266381
Option 2 ID : 4410093266382
Option 3 ID : 4410093266383
Option 4 ID : 4410093266384

Q.5 Choose the correct verb to complete the sentence.

The data ____ a clear correlation between the two variables.

- Ans
- 1. wondered
 - 2. assumed
 - 3. demonstrated
 - 4. speculated

Question ID : 4410091027570
Option 1 ID : 4410094061813
Option 2 ID : 4410094061814
Option 3 ID : 4410094061812
Option 4 ID : 4410094061811

Q.6 One of the four highlighted words in the given sentence is incorrectly spelt. Select the option that rectifies the incorrectly spelt word.

The quaint (A) village was the quintessential (B) example of English charm and picturesque (C) scenery (D).

- Ans
- 1. quintessential
 - 2. quaent
 - 3. pictrisque
 - 4. scenery

Question ID : 441009409509
Option 1 ID : 4410091603427
Option 2 ID : 4410091603426
Option 3 ID : 4410091603428
Option 4 ID : 4410091603429

Q.7 Select the word that has the same meaning as the highlighted phrase in the given sentence.

The artist's career underwent numerous changes and challenges over time.

- Ans
- 1. vicissitude
 - 2. bounty
 - 3. defunct
 - 4. thrifty

Question ID : 4410091600521
Option 1 ID : 4410096321763
Option 2 ID : 4410096321764
Option 3 ID : 4410096321766
Option 4 ID : 4410096321765

Q.8 A sentence divided into multiple segments is given below. The first segment is fixed, while the rest have been jumbled up. Rearrange the jumbled segments to form a coherent statement.

Although it was raining,
(P) they continued the match,
(Q) and finally won
(R) the trophy
(S) showing great determination

- Ans
- 1. PRSQ
 - 2. PRQS
 - 3. PQSR
 - 4. PQRS

Question ID : 4410091313569
Option 1 ID : 4410095185983
Option 2 ID : 4410095185981
Option 3 ID : 4410095185980
Option 4 ID : 4410095185982

Q.9 Identify the opposite of the underlined word in the given sentence:

The manager was frustrated by the intern's sluggish response.

- Ans
- 1. swift
 - 2. stern
 - 3. tedious
 - 4. concise

Question ID : 4410091555177
Option 1 ID : 4410096143321
Option 2 ID : 4410096143322
Option 3 ID : 4410096143319
Option 4 ID : 4410096143320

Q.10 Complete the sentence with the most appropriate meaning of the underlined idiom.

Despite the warning, he continued to invest in shady deals. Now he's really going to have to face the music.

- Ans
- 1. take responsibility for the consequences
 - 2. attend a concert
 - 3. blame someone else
 - 4. sing in public

Question ID : 4410091122058
Option 1 ID : 4410094423794
Option 2 ID : 4410094423793
Option 3 ID : 4410094423796
Option 4 ID : 4410094423795

Q.11 Parts of a sentence are given below. While the first part is in the correct place, the remaining parts (labelled P, Q, R and S) are jumbled up. Arrange the parts in the correct order to form a meaningful and coherent sentence.

1. It is thought that

P) foundation of modern yoga in

Q) approximately 3000 BC during

R) the Indus Valley Civilization created the

S) the early Bronze Age

Ans 1. SPQR

2. RPQS

3. QPSR

4. PQRS

Question ID : 441009352135

Option 1 ID : 4410091374892

Option 2 ID : 4410091374890

Option 3 ID : 4410091374891

Option 4 ID : 4410091374893

Q.12 Select the INCORRECTLY spelt word.

Ans 1. Hostlie

2. Melancholy

3. Ingratitude

4. Secretive

Question ID : 441009176633

Option 1 ID : 441009698443

Option 2 ID : 441009698442

Option 3 ID : 441009698441

Option 4 ID : 441009698444

Q.13 Select the option that correctly replaces the highlighted part of the given statement.

The film is without a doubt the filmmaker's masterpiece, despite a minor plot hole in the third act, after all even great people make mistakes.¹⁴²⁴

Ans 1. You cannot make an omelette without breaking eggs

2. Even Homer nods

3. A bad workman always blames his tools

4. All that glitters is not gold

Question ID : 441009416486

Option 1 ID : 4410091631336

Option 2 ID : 4410091631337

Option 3 ID : 4410091631334

Option 4 ID : 4410091631335

Q.14 Identify the opposite of the underlined word in the given sentence.

Her capricious decisions made it hard for the team to plan strategies.

- Ans
- 1. taciturn
 - 2. pragmatic
 - 3. astral
 - 4. oblique

Question ID : 4410091555179
Option 1 ID : 4410096143329
Option 2 ID : 4410096143328
Option 3 ID : 4410096143330
Option 4 ID : 4410096143327

Q.15 Complete the sentence with the appropriate word.

The weather is so _____ today that everyone wants to go for a walk.

- Ans
- 1. blustery
 - 2. pleasant
 - 3. fragile
 - 4. erratic

Question ID : 4410091552985
Option 1 ID : 4410096134258
Option 2 ID : 4410096134256
Option 3 ID : 4410096134257
Option 4 ID : 4410096134259

Comprehension:

Read the given passage and answer the questions that follow.

In a world where crimes often leave no witnesses, forensic science serves as the silent detective, uncovering hidden truths. It is the application of scientific methods to criminal investigations, helping law enforcement solve cases by analysing physical evidence. From microscopic fingerprints to complex DNA sequencing, forensic science bridges the gap between mystery and justice.

Every crime scene tells a story—one that forensic experts decode using various disciplines. Forensic pathology determines causes of death through autopsies, while toxicology detects poisons or drugs in the body. Ballistics traces bullets back to weapons and fingerprint analysis identifies suspects with remarkable precision. DNA profiling, one of the most revolutionary techniques, can link a criminal to a scene or prove someone's innocence.

Beyond crime-solving, forensic science also plays a role in national security, identifying disaster victims and exposing fraud. However, it is not without challenges—misinterpretation of evidence and human error can lead to wrongful convictions. Yet, continuous advancements in technology, such as artificial intelligence and genetic analysis, are making forensic science more reliable than ever.

Forensic science is a powerful tool, turning the smallest clue into the key to justice. In the end, the evidence never lies—only people do.

SubQuestion No : 16

Q.16 What is the primary role of forensic science?

- Ans
- 1. To act as a substitute for law enforcement
 - 2. To prevent crimes from happening
 - 3. To predict future crimes
 - 4. To apply scientific methods in criminal investigations

Question ID : 44100928684
Option 1 ID : 441009114258
Option 2 ID : 441009114257
Option 3 ID : 441009114255
Option 4 ID : 441009114256

Comprehension:

Read the given passage and answer the questions that follow.

In a world where crimes often leave no witnesses, forensic science serves as the silent detective, uncovering hidden truths. It is the application of scientific methods to criminal investigations, helping law enforcement solve cases by analysing physical evidence. From microscopic fingerprints to complex DNA sequencing, forensic science bridges the gap between mystery and justice.

Every crime scene tells a story—one that forensic experts decode using various disciplines. Forensic pathology determines causes of death through autopsies, while toxicology detects poisons or drugs in the body. Ballistics traces bullets back to weapons and fingerprint analysis identifies suspects with remarkable precision. DNA profiling, one of the most revolutionary techniques, can link a criminal to a scene or prove someone's innocence.

Beyond crime-solving, forensic science also plays a role in national security, identifying disaster victims and exposing fraud. However, it is not without challenges—misinterpretation of evidence and human error can lead to wrongful convictions. Yet, continuous advancements in technology, such as artificial intelligence and genetic analysis, are making forensic science more reliable than ever.

Forensic science is a powerful tool, turning the smallest clue into the key to justice. In the end, the evidence never lies—only people do.

SubQuestion No : 17

Q.17 Which forensic technique is used to determine the cause of death?

- Ans
- 1. Fingerprint analysis
 - 2. Forensic pathology
 - 3. Toxicology
 - 4. Ballistics

Question ID : 44100928685
Option 1 ID : 441009114261
Option 2 ID : 441009114262
Option 3 ID : 441009114259
Option 4 ID : 441009114260

Comprehension:

Read the given passage and answer the questions that follow.

In a world where crimes often leave no witnesses, forensic science serves as the silent detective, uncovering hidden truths. It is the application of scientific methods to criminal investigations, helping law enforcement solve cases by analysing physical evidence. From microscopic fingerprints to complex DNA sequencing, forensic science bridges the gap between mystery and justice.

Every crime scene tells a story—one that forensic experts decode using various disciplines. Forensic pathology determines causes of death through autopsies, while toxicology detects poisons or drugs in the body. Ballistics traces bullets back to weapons and fingerprint analysis identifies suspects with remarkable precision. DNA profiling, one of the most revolutionary techniques, can link a criminal to a scene or prove someone's innocence.

Beyond crime-solving, forensic science also plays a role in national security, identifying disaster victims and exposing fraud. However, it is not without challenges—misinterpretation of evidence and human error can lead to wrongful convictions. Yet, continuous advancements in technology, such as artificial intelligence and genetic analysis, are making forensic science more reliable than ever.

Forensic science is a powerful tool, turning the smallest clue into the key to justice. In the end, the evidence never lies—only people do.

SubQuestion No : 18

Q.18 Why is DNA profiling considered revolutionary in forensic science?

- Ans**
- 1. It can link a suspect to a crime scene or prove innocence with high accuracy.
 - 2. It is the only method that can identify criminals.
 - 3. It does not require physical evidence.
 - 4. It replaces all other forensic techniques.

Question ID : 44100928686
Option 1 ID : 441009114265
Option 2 ID : 441009114264
Option 3 ID : 441009114266
Option 4 ID : 441009114263

Comprehension:

Read the given passage and answer the questions that follow.

In a world where crimes often leave no witnesses, forensic science serves as the silent detective, uncovering hidden truths. It is the application of scientific methods to criminal investigations, helping law enforcement solve cases by analysing physical evidence. From microscopic fingerprints to complex DNA sequencing, forensic science bridges the gap between mystery and justice.

Every crime scene tells a story—one that forensic experts decode using various disciplines. Forensic pathology determines causes of death through autopsies, while toxicology detects poisons or drugs in the body. Ballistics traces bullets back to weapons and fingerprint analysis identifies suspects with remarkable precision. DNA profiling, one of the most revolutionary techniques, can link a criminal to a scene or prove someone's innocence.

Beyond crime-solving, forensic science also plays a role in national security, identifying disaster victims and exposing fraud. However, it is not without challenges—misinterpretation of evidence and human error can lead to wrongful convictions. Yet, continuous advancements in technology, such as artificial intelligence and genetic analysis, are making forensic science more reliable than ever.

Forensic science is a powerful tool, turning the smallest clue into the key to justice. In the end, the evidence never lies—only people do.

SubQuestion No : 19

Q.19 Select the most appropriate **ANTONYM** of the word 'reliable' in the context of forensic science.

- Ans**
- 1. Flawed
 - 2. Trustworthy
 - 3. Accurate
 - 4. Dependable

Question ID : 44100928687
Option 1 ID : 441009114270
Option 2 ID : 441009114269
Option 3 ID : 441009114267
Option 4 ID : 441009114268

Comprehension:

Read the given passage and answer the questions that follow.

In a world where crimes often leave no witnesses, forensic science serves as the silent detective, uncovering hidden truths. It is the application of scientific methods to criminal investigations, helping law enforcement solve cases by analysing physical evidence. From microscopic fingerprints to complex DNA sequencing, forensic science bridges the gap between mystery and justice.

Every crime scene tells a story—one that forensic experts decode using various disciplines. Forensic pathology determines causes of death through autopsies, while toxicology detects poisons or drugs in the body. Ballistics traces bullets back to weapons and fingerprint analysis identifies suspects with remarkable precision. DNA profiling, one of the most revolutionary techniques, can link a criminal to a scene or prove someone's innocence.

Beyond crime-solving, forensic science also plays a role in national security, identifying disaster victims and exposing fraud. However, it is not without challenges—misinterpretation of evidence and human error can lead to wrongful convictions. Yet, continuous advancements in technology, such as artificial intelligence and genetic analysis, are making forensic science more reliable than ever.

Forensic science is a powerful tool, turning the smallest clue into the key to justice. In the end, the evidence never lies—only people do.

SubQuestion No : 20

Q.20 Which of the following would be the most suitable title for the passage?

- Ans 1. Cracking Cases: The Power of Forensic Science
 2. The Mystery of Crime Scenes and Detectives
 3. Forensic Science: A Field of Endless Challenges
 4. Forensic Science: The Future of Crime

Question ID : 44100928688
Option 1 ID : 441009114273
Option 2 ID : 441009114274
Option 3 ID : 441009114272
Option 4 ID : 441009114271

Section : Hindi Language and Comprehension

Q.1 'उड़ते पंक्षी का क्या भरोसा' लोकोक्ति का सही अर्थ है-

- Ans 1. पारंपरिक व्यक्ति हो जाना
 2. अस्थिर व्यक्ति या वस्तु पर भरोसा नहीं किया जा सकता
 3. आध्यात्मिक शक्ति का भान हो जाना
 4. अपनी जड़ता को व्यक्त करना

Question ID : 4410091629450
Option 1 ID : 4410096435888
Option 2 ID : 4410096435886
Option 3 ID : 4410096435889
Option 4 ID : 4410096435887

Q.2 किसी अनिष्ट की आशंका ने उसे बेचैन कर दिया।
उपर्युक्त रेखांकित शब्द का विलोम क्या होगा ?

- Ans
- 1. अधीर
 - 2. हकीकत
 - 3. गंभीर
 - 4. चैन

Question ID : 4410091624868
Option 1 ID : 4410096417999
Option 2 ID : 4410096418002
Option 3 ID : 4410096418000
Option 4 ID : 4410096418001

Q.3 निम्नांकित विकल्पों में से उचित क्रिया का चयन करके वाक्य पूर्ण करें-
मकबरा और मीनारें उत्कृष्ट श्वेत संगमरमर की हुई हैं।

- Ans
- 1. बना
 - 2. बनी
 - 3. बने
 - 4. बनानी

Question ID : 4410091184036
Option 1 ID : 4410094670172
Option 2 ID : 4410094670173
Option 3 ID : 4410094670174
Option 4 ID : 4410094670175

Q.4 जंगल की अग्नि ने सब कुछ भस्म कर दिया।
वाक्य में प्रयुक्त अग्नि शब्द का पर्यायवाची क्या है?

- Ans
- 1. प्रपंच
 - 2. वणिक
 - 3. वह्नि
 - 4. पौरुष

Question ID : 4410091626461
Option 1 ID : 4410096424218
Option 2 ID : 4410096424216
Option 3 ID : 4410096424219
Option 4 ID : 4410096424217

Q.5 'टूट पार होना' मुहावरे का सही अर्थ क्या होगा?

- Ans
- 1. कहीं का नहीं
 - 2. काम निकल जाना
 - 3. अनुभव को प्रकट न कर पाना
 - 4. गायब कर देना

Question ID : 4410091624791
Option 1 ID : 4410096417691
Option 2 ID : 4410096417693
Option 3 ID : 4410096417694
Option 4 ID : 4410096417692

Q.6 निम्नलिखित विकल्पों में से रेखांकित शब्द का पर्यायवाची पहचानिए।
'हमारे गाँव में एक मान्यता है कि लगभग 50 साल पहले एक दानव ने गाँव के लोगों को बहुत कष्ट दिया था।'

- Ans
- 1. देवांश
 - 2. हय
 - 3. निशाचर
 - 4. अंधड़

Question ID : 4410091629797
Option 1 ID : 4410096437273
Option 2 ID : 4410096437274
Option 3 ID : 4410096437275
Option 4 ID : 4410096437276

Q.7 निम्नलिखित विकल्पों में से कौन-से वाक्य में वर्तनी से सम्बन्धित त्रुटि नहीं है?

- Ans
- 1. अपने पिता से तिरिस्कार पाकर वह टूट गया।
 - 2. अपने पिता से तिरिष्कार पाकर वह टूट गया।
 - 3. अपने पिता से तिरिस्कार पाकर वह टूट गया।
 - 4. अपने पिता से तिरस्कार पाकर वह टूट गया।

Question ID : 4410091530723
Option 1 ID : 4410096045976
Option 2 ID : 4410096045978
Option 3 ID : 4410096045975
Option 4 ID : 4410096045977

Q.8 सही क्रिया का चयन कर वाक्य को पूर्ण कीजिए।
दिनेश नाई से बाल है।

- Ans 1. लगवाता
 2. कटवाता
 3. दिलवाता
 4. पिटवाता

Question ID : 4410091253821
Option 1 ID : 4410094948342
Option 2 ID : 4410094948341
Option 3 ID : 4410094948344
Option 4 ID : 4410094948343

Q.9 उपयुक्त रीतिवाचक क्रिया-विशेषण से वाक्य को पूर्ण कीजिए।
नौकर भाग गया।

- Ans 1. तुरंत
 2. परसों
 3. चुपके से
 4. दिल्ली

Question ID : 4410091251229
Option 1 ID : 4410094938099
Option 2 ID : 4410094938100
Option 3 ID : 4410094938098
Option 4 ID : 4410094938097

Q.10 उपयुक्त 'क्रिया-विशेषण' का चयन कर रिक्त स्थान की पूर्ति कीजिए।
'उसे से दिखाई नहीं देता है।'

- Ans 1. भूल
 2. ठीक
 3. चुपके
 4. अचानक

Question ID : 4410091524877
Option 1 ID : 4410096022713
Option 2 ID : 4410096022714
Option 3 ID : 4410096022712
Option 4 ID : 4410096022711

Q.11 युद्ध में भीरु सैनिक भाग जाते हैं।

वाक्य में प्रयुक्त भीरु शब्द का विलोम क्या है?

- Ans
- 1. निर्भीक
 - 2. विषम
 - 3. व्याघ्र
 - 4. विक्षुब्ध

Question ID : 4410091626328
Option 1 ID : 4410096423702
Option 2 ID : 4410096423703
Option 3 ID : 4410096423701
Option 4 ID : 4410096423704

Q.12 नीचे एक वाक्य के खंडों को अव्यवस्थित क्रम में लिखा गया है। उस विकल्प का चयन करिए जो वाक्य का सही क्रम बताता हो-

- (a) आज हमारी भारतीय संस्कृति
- (b) बादल मंडरा रहे हैं
- (c) पर पाश्चात्य भौतिकवादी
- (d) संस्कृति के काले

- Ans
- 1. a,c,d,b
 - 2. b,a,d,c
 - 3. c,b,d,a
 - 4. a,d,c,b

Question ID : 441009281042
Option 1 ID : 4410091092097
Option 2 ID : 4410091092098
Option 3 ID : 4410091092096
Option 4 ID : 4410091092095

Q.13 दिए गए वाक्य में गुणवाचक विशेषण का चयन करके रिक्त स्थान की पूर्ति करें-
पर्यावरण संरक्षण के लिए सरकार ने -----योजनाओं का क्रियान्वयन किया।

- Ans
- 1. बहुत
 - 2. अनेक
 - 3. नयी
 - 4. हजारों

Question ID : 4410091547165
Option 1 ID : 4410096111534
Option 2 ID : 4410096111536
Option 3 ID : 4410096111535
Option 4 ID : 4410096111533

Q.14 दिए गए वाक्य को क्रम में लिखें -

1. इसके माध्यम से हम दुनिया भर की जानकारी पाते हैं
2. इंटरनेट आज का सबसे शक्तिशाली साधन बन चुका है
3. इसलिए हमें इंटरनेट का उपयोग सोच-समझकर करना चाहिए
4. शिक्षा ग्रहण करते हैं और संवाद करते हैं

- Ans
- 1. 1324
 - 2. 2143
 - 3. 4213
 - 4. 3124

Question ID : 441009644894
Option 1 ID : 4410092533662
Option 2 ID : 4410092533660
Option 3 ID : 4410092533659
Option 4 ID : 4410092533661

Q.15 नीचे दिए गए वाक्य के किस भाग में वर्तनी संबंधी अशुद्धि है?
वहाँ पहोचकर पत्र लिख देना ।

- Ans
- 1. पत्र
 - 2. लिख देना ।
 - 3. वहाँ
 - 4. पहोचकर

Question ID : 4410091624818
Option 1 ID : 4410096417801
Option 2 ID : 4410096417802
Option 3 ID : 4410096417799
Option 4 ID : 4410096417800

Comprehension:

निम्नलिखित गद्यांश के आधार पर पूछे गए प्रश्नों के सही विकल्प का चयन करें-
अनुशासन का अर्थ है—नियमों-विधियों का पालन करना। अनुशासन की कसौटी है— स्वशासन अर्थात् बिना किसी दबाव या भय के स्वयं सहज रूप में नियमों का पालन करना। जो व्यक्ति, परिवार, समाज या देश अनुशासित होता है, वह प्रगति के पथ पर निरन्तर आगे बढ़ता रहता है। अनुशासित व्यक्ति अपने आचरण से मूल्यों को व्यवहार में ढालकर आदर्श प्रस्तुत करता है। वह आत्म-संयम से यह समझता है कि क्या करना चाहिए और क्या नहीं करना चाहिए। अनुशासन एक प्रकार का भाव है, जो लोक-मंगल की ओर प्रवृत्त रहता है। समाज और राजनियमों का, स्वास्थ्य और सदाचार के नियमों का अनुशासित व्यक्ति स्वेच्छा से पालन करता है। फलतः अनुशासन उसके स्वभाव का अंग बन जाता है। ऐसा व्यक्ति अपने कर्तव्यों के प्रति सजग रहता है और अधिकारों का भी संतुलित प्रयोग करता है। अनुशासन से जीवन में व्यवस्था, शान्ति और सफलता आती है तथा व्यक्ति का सर्वांगीण विकास संभव होता है।

SubQuestion No : 16**Q.16 अनुशासन मनुष्य को प्रेरित करता है-**

- Ans
- 1. स्वार्थभाव को ओर
 - 2. लोक मंगल की ओर
 - 3. आत्मकेन्द्रित प्रवृत्ति की ओर
 - 4. अधिकाधिक संग्रहण की प्रवृत्ति की ओर

Question ID : 4410091617885
Option 1 ID : 4410096390419
Option 2 ID : 4410096390422
Option 3 ID : 4410096390420
Option 4 ID : 4410096390421

Comprehension:

निम्नलिखित गद्यांश के आधार पर पूछे गए प्रश्नों के सही विकल्प का चयन करें-
अनुशासन का अर्थ है—नियमों-विधियों का पालन करना। अनुशासन की कसौटी है— स्वशासन अर्थात् बिना किसी दबाव या भय के स्वयं सहज रूप में नियमों का पालन करना। जो व्यक्ति, परिवार, समाज या देश अनुशासित होता है, वह प्रगति के पथ पर निरन्तर आगे बढ़ता रहता है। अनुशासित व्यक्ति अपने आचरण से मूल्यों को व्यवहार में ढालकर आदर्श प्रस्तुत करता है। वह आत्म-संयम से यह समझता है कि क्या करना चाहिए और क्या नहीं करना चाहिए। अनुशासन एक प्रकार का भाव है, जो लोक-मंगल की ओर प्रवृत्त रहता है। समाज और राजनियमों का, स्वास्थ्य और सदाचार के नियमों का अनुशासित व्यक्ति स्वेच्छा से पालन करता है। फलतः अनुशासन उसके स्वभाव का अंग बन जाता है। ऐसा व्यक्ति अपने कर्तव्यों के प्रति सजग रहता है और अधिकारों का भी संतुलित प्रयोग करता है। अनुशासन से जीवन में व्यवस्था, शान्ति और सफलता आती है तथा व्यक्ति का सर्वांगीण विकास संभव होता है।

SubQuestion No : 17**Q.17 अनुशासन के 'स्वशासन' रूपी स्वरूप का वास्तविक निहितार्थ क्या है?**

- Ans
- 1. व्यक्तिगत अधिकारों को सुरक्षित रखने के लिए समाज द्वारा थोपे गए अंकुशों को स्वीकार करना
 - 2. केवल भौतिक प्रगति और सफलता प्राप्त करने के लिए कठोर नियमों की व्यवस्था करना
 - 3. आत्म-संयम के माध्यम से लोक-कल्याण की भावना को अपने स्वभाव में आत्मसात करना
 - 4. बाह्य नियमों और सामाजिक मानदंडों का दंड के भय से अक्षुण्ण पालन करना

Question ID : 4410091617886
Option 1 ID : 4410096390424
Option 2 ID : 4410096390426
Option 3 ID : 4410096390425
Option 4 ID : 4410096390423

Comprehension:

निम्नलिखित गद्यांश के आधार पर पूछे गए प्रश्नों के सही विकल्प का चयन करें-
अनुशासन का अर्थ है—नियमों-विधियों का पालन करना। अनुशासन की कसौटी है— स्वशासन अर्थात् बिना किसी दबाव या भय के स्वयं सहज रूप में नियमों का पालन करना। जो व्यक्ति, परिवार, समाज या देश अनुशासित होता है, वह प्रगति के पथ पर निरन्तर आगे बढ़ता रहता है। अनुशासित व्यक्ति अपने आचरण से मूल्यों को व्यवहार में ढालकर आदर्श प्रस्तुत करता है। वह आत्म-संयम से यह समझता है कि क्या करना चाहिए और क्या नहीं करना चाहिए। अनुशासन एक प्रकार का भाव है, जो लोक-मंगल की ओर प्रवृत्त रहता है। समाज और राजनियमों का, स्वास्थ्य और सदाचार के नियमों का अनुशासित व्यक्ति स्वेच्छा से पालन करता है। फलतः अनुशासन उसके स्वभाव का अंग बन जाता है। ऐसा व्यक्ति अपने कर्तव्यों के प्रति सजग रहता है और अधिकारों का भी संतुलित प्रयोग करता है। अनुशासन से जीवन में व्यवस्था, शान्ति और सफलता आती है तथा व्यक्ति का सर्वांगीण विकास संभव होता है।

SubQuestion No : 18**Q.18 अनुशासन व्यक्ति के जीवन में क्या परिवर्तन लाता है?**

- Ans
- 1. स्वतंत्रता का पूरी तरह अंत हो जाता है
 - 2. केवल आर्थिक समृद्धि
 - 3. समाज में अराजकता और तनाव
 - 4. जीवन में व्यवस्था, शान्ति और सफलता

Question ID : 4410091617887
Option 1 ID : 4410096390429
Option 2 ID : 4410096390427
Option 3 ID : 4410096390430
Option 4 ID : 4410096390428

Comprehension:

निम्नलिखित गद्यांश के आधार पर पूछे गए प्रश्नों के सही विकल्प का चयन करें-
अनुशासन का अर्थ है—नियमों-विधियों का पालन करना। अनुशासन की कसौटी है— स्वशासन अर्थात् बिना किसी दबाव या भय के स्वयं सहज रूप में नियमों का पालन करना। जो व्यक्ति, परिवार, समाज या देश अनुशासित होता है, वह प्रगति के पथ पर निरन्तर आगे बढ़ता रहता है। अनुशासित व्यक्ति अपने आचरण से मूल्यों को व्यवहार में ढालकर आदर्श प्रस्तुत करता है। वह आत्म-संयम से यह समझता है कि क्या करना चाहिए और क्या नहीं करना चाहिए। अनुशासन एक प्रकार का भाव है, जो लोक-मंगल की ओर प्रवृत्त रहता है। समाज और राजनियमों का, स्वास्थ्य और सदाचार के नियमों का अनुशासित व्यक्ति स्वेच्छा से पालन करता है। फलतः अनुशासन उसके स्वभाव का अंग बन जाता है। ऐसा व्यक्ति अपने कर्तव्यों के प्रति सजग रहता है और अधिकारों का भी संतुलित प्रयोग करता है। अनुशासन से जीवन में व्यवस्था, शान्ति और सफलता आती है तथा व्यक्ति का सर्वांगीण विकास संभव होता है।

SubQuestion No : 19**Q.19 अनुशासन व्यक्ति के 'अधिकारों' और 'कर्तव्यों' के बीच किस प्रकार का संबंध स्थापित करता है?**

- Ans
- 1. वह अधिकारों के संतुलित प्रयोग के साथ-साथ कर्तव्यों के प्रति निरंतर सजगता पैदा करता है
 - 2. वह व्यक्ति को केवल अपने अधिकारों के प्रति सजग बनाता है ताकि सफलता मिल सके
 - 3. वह कर्तव्यों को एक दबाव के रूप में प्रस्तुत करता है जिससे अधिकारों का त्याग करना पड़े
 - 4. वह अधिकारों और कर्तव्यों को एक-दूसरे का विरोधी मानकर केवल नियमों पर जोर देता है

Question ID : 4410091617888
Option 1 ID : 4410096390433
Option 2 ID : 4410096390431
Option 3 ID : 4410096390432
Option 4 ID : 4410096390434

Comprehension:

निम्नलिखित गद्यांश के आधार पर पूछे गए प्रश्नों के सही विकल्प का चयन करें—
 अनुशासन का अर्थ है—नियमों-विधियों का पालन करना। अनुशासन की कसौटी है— स्वशासन अर्थात् बिना किसी दबाव या भय के स्वयं सहज रूप में नियमों का पालन करना। जो व्यक्ति, परिवार, समाज या देश अनुशासित होता है, वह प्रगति के पथ पर निरन्तर आगे बढ़ता रहता है। अनुशासित व्यक्ति अपने आचरण से मूल्यों को व्यवहार में ढालकर आदर्श प्रस्तुत करता है। वह आत्म-संयम से यह समझता है कि क्या करना चाहिए और क्या नहीं करना चाहिए। अनुशासन एक प्रकार का भाव है, जो लोक-मंगल की ओर प्रवृत्त रहता है। समाज और राजनियमों का, स्वास्थ्य और सदाचार के नियमों का अनुशासित व्यक्ति स्वेच्छा से पालन करता है। फलतः अनुशासन उसके स्वभाव का अंग बन जाता है। ऐसा व्यक्ति अपने कर्तव्यों के प्रति सजग रहता है और अधिकारों का भी संतुलित प्रयोग करता है। अनुशासन से जीवन में व्यवस्था, शान्ति और सफलता आती है तथा व्यक्ति का सर्वांगीण विकास संभव होता है।

SubQuestion No : 20**Q.20 आत्म-संयम से क्या अभिप्राय है?**

- Ans**
- 1. निराहार रहना
 - 2. वीतरागी
 - 3. करने और न करने योग्य कार्यों का ज्ञान
 - 4. इन्द्रिय दमन

Question ID : 4410091617889
 Option 1 ID : 4410096390438
 Option 2 ID : 4410096390435
 Option 3 ID : 4410096390437
 Option 4 ID : 4410096390436

Section : Discipline1

Q.1 How does the RTE Act, 2009, address the concept of Universalization of Elementary Education (UEE)?

- Ans**
- 1. By providing scholarships for college students
 - 2. By introducing compulsory higher education
 - 3. By setting up only urban schools
 - 4. By mandating free compulsory education aged 6-14

Question ID : 4410091640223
 Option 1 ID : 4410096478092
 Option 2 ID : 4410096478090
 Option 3 ID : 4410096478093
 Option 4 ID : 4410096478091

Q.2 A rural, low-income student struggles to access digital learning tools. Which aspect of social diversity is reflected?

- Ans
- 1. Gender and linguistic diversity
 - 2. Regional and economic diversity
 - 3. Linguistic and religious diversity
 - 4. Religious and gender diversity

Question ID : 4410091568293

Option 1 ID : 4410096194459

Option 2 ID : 4410096194457

Option 3 ID : 4410096194456

Option 4 ID : 4410096194458

Q.3 Which Constitutional Amendment made the Right to Education a fundamental right in India?

- Ans
- 1. 44th Amendment
 - 2. 73rd Amendment
 - 3. 42nd Amendment
 - 4. 86th Amendment

Question ID : 4410091688608

Option 1 ID : 4410096661091

Option 2 ID : 4410096661093

Option 3 ID : 4410096661090

Option 4 ID : 4410096661092

Q.4 Which stage of development is characterized by rapid physical growth and the emergence of basic emotions like joy and fear?

- Ans
- 1. Adulthood
 - 2. Infancy
 - 3. Childhood
 - 4. Adolescence

Question ID : 4410091645425

Option 1 ID : 4410096498235

Option 2 ID : 4410096498232

Option 3 ID : 4410096498233

Option 4 ID : 4410096498234

Q.5 What did the University Education Commission describe as the 'weakest link' in India's educational machinery?

- Ans
- 1. Secondary education
 - 2. Vocational education
 - 3. Primary education
 - 4. Higher education

Question ID : 4410091601770
Option 1 ID : 4410096326684
Option 2 ID : 4410096326685
Option 3 ID : 4410096326682
Option 4 ID : 4410096326683

Q.6 A development agency implements a programme that focuses solely on increasing women's income as the strategy to reduce gender discrimination in a community. Which critical dimension of women's empowerment and gender equality is this approach most likely to overlook?

- Ans
- 1. The need to challenge patriarchy and expanding women's agency beyond income
 - 2. The creation of employment opportunities for men to balance gender relations within the community
 - 3. The provision of universal food security to households as a means to support well-being
 - 4. The promotion of new agricultural technologies to raise overall community productivity

Question ID : 4410091628634
Option 1 ID : 4410096432682
Option 2 ID : 4410096432683
Option 3 ID : 4410096432684
Option 4 ID : 4410096432685

Q.7 A teacher observes that a four-year-old child often volunteers to lead group activities and expresses excitement when praised for new ideas. Based on Erikson's psychosocial stages, which virtue is most likely being developed in this child?

- Ans
- 1. Hope, secure attachment
 - 2. Competence, pride
 - 3. Purpose, confidence
 - 4. Willpower, self-control

Question ID : 4410091604067
Option 1 ID : 4410096335457
Option 2 ID : 4410096335455
Option 3 ID : 4410096335454
Option 4 ID : 4410096335456

Q.8 Which of the following is an example of fine motor skill development in early childhood?

- Ans
- 1. Climbing stairs
 - 2. Threading beads onto a string
 - 3. Hopping on one foot
 - 4. Running around a playground

Question ID : 4410091624456

Option 1 ID : 4410096416370

Option 2 ID : 4410096416367

Option 3 ID : 4410096416369

Option 4 ID : 4410096416368

Q.9 Given society's dynamic nature, continuous curriculum reform primarily addresses which essential educational requirement?

- Ans
- 1. Stabilizing local power structures
 - 2. Simplifying textbook content
 - 3. Reflecting ongoing social change
 - 4. Preserving static cultural heritage

Question ID : 4410091549673

Option 1 ID : 4410096121389

Option 2 ID : 4410096121392

Option 3 ID : 4410096121390

Option 4 ID : 4410096121391

Q.10 A teacher asks 4-year-olds to copy shapes, stack blocks, and button large buttons. Which developmental domain do these tasks primarily target?

- Ans
- 1. Fine motor precision and hand-eye coordination
 - 2. Gross motor coordination and balance control
 - 3. Locomotor agility and spatial movement skills
 - 4. Sensory integration and perceptual processing skills

Question ID : 4410091628257

Option 1 ID : 4410096431200

Option 2 ID : 4410096431198

Option 3 ID : 4410096431201

Option 4 ID : 4410096431199

Q.11 Which of the following best represents a core objective of Peace Education as described in educational literature?

- Ans
- 1. Promoting intense academic competition among learners
 - 2. Developing skills for non-violent conflict resolution
 - 3. Training unquestioning compliance with authority figures
 - 4. Emphasising memorisation of institutional rules alone

Question ID : 4410091541844
Option 1 ID : 4410096090543
Option 2 ID : 4410096090544
Option 3 ID : 4410096090545
Option 4 ID : 4410096090546

Q.12 Why is literacy essential for achieving upward social mobility?

- Ans
- 1. It removes language diversity in Indian Context.
 - 2. It opens opportunities for better education and jobs.
 - 3. It standardizes all school curricula throughout the country.
 - 4. It ensures everyone is from the same region.

Question ID : 4410091617803
Option 1 ID : 4410096390101
Option 2 ID : 4410096390100
Option 3 ID : 4410096390102
Option 4 ID : 4410096390099

Q.13 How does education contribute to national integration in a diverse society?

- Ans
- 1. By promoting a respect for cultural differences
 - 2. By restricting the teaching of multiple languages
 - 3. By encouraging regional isolation among learners
 - 4. By emphasizing only historical achievements

Question ID : 4410091631072
Option 1 ID : 4410096442511
Option 2 ID : 4410096442512
Option 3 ID : 4410096442510
Option 4 ID : 4410096442513

Q.14 A child from a collectivist community is observed to prioritize group harmony and cooperation, even when facing individual challenges. What underlying factor most likely shapes this behavior?

- Ans
- 1. Collectivist values promoting group harmony
 - 2. Genetic predisposition to competitiveness
 - 3. Malnutrition affecting social adaptation
 - 4. Cultural traditions emphasizing interdependence

Question ID : 4410091604079
Option 1 ID : 4410096335504
Option 2 ID : 4410096335503
Option 3 ID : 4410096335505
Option 4 ID : 4410096335502

Q.15 Which situation most clearly indicates a milestone of emotional development in late childhood?

- Ans
- 1. A child playing tag with classmates at recess
 - 2. A child constructing elaborate block structures alone
 - 3. A child discussing personal fears with a trusted adult
 - 4. A child tying shoelaces independently before school

Question ID : 4410091678783
Option 1 ID : 4410096623344
Option 2 ID : 4410096623343
Option 3 ID : 4410096623341
Option 4 ID : 4410096623342

Q.16 According to Kohlberg, the pre-conventional level is guided mainly by:

- Ans
- 1. Social consensus and approval
 - 2. Internalized ethical principles
 - 3. Desire to avoid punishment or gain rewards
 - 4. Formal operations and hypothetical reasoning

Question ID : 4410091572178
Option 1 ID : 4410096209715
Option 2 ID : 4410096209714
Option 3 ID : 4410096209717
Option 4 ID : 4410096209716

Q.17 Which feature best describes the linguistic aspect of contemporary Indian society?

- Ans
- 1. It has only one official language spoken by all citizens
 - 2. There are no significant regional dialects in India
 - 3. A single dominant language replaces regional dialects
 - 4. It is characterized by the coexistence of multiple languages

Question ID : 4410091607444
Option 1 ID : 4410096348749
Option 2 ID : 4410096348751
Option 3 ID : 4410096348750
Option 4 ID : 4410096348748

Q.18 Radhakrishnan Commission 1948-49 is related to:

- Ans
- 1. School education
 - 2. Public examinations
 - 3. Anganbadi development
 - 4. University education

Question ID : 4410091544099
Option 1 ID : 4410096099496
Option 2 ID : 4410096099495
Option 3 ID : 4410096099498
Option 4 ID : 4410096099497

Q.19 Which combination best illustrates the difference between fine and gross motor skills in early childhood development?

- Ans
- 1. Climbing stairs and running in the playground
 - 2. Stringing beads and writing with a pencil
 - 3. Writing with a pencil and running in the playground
 - 4. Climbing stairs and hopping on one foot

Question ID : 4410091600168
Option 1 ID : 4410096320360
Option 2 ID : 4410096320361
Option 3 ID : 4410096320359
Option 4 ID : 4410096320362

Q.20 The 86th Constitutional Amendment Act deals primarily with which aspect?

- Ans
- 1. Right to vote for all adults
 - 2. Right to free and compulsory education
 - 3. Employment guarantee for rural citizens
 - 4. Reservation for women in Parliament

Question ID : 4410091692788
Option 1 ID : 4410096677195
Option 2 ID : 4410096677196
Option 3 ID : 4410096677197
Option 4 ID : 4410096677198

Section : Discipline2

Q.1 When students extract key ideas from a history text and present their summary, which role does language primarily play in the learning process?

- Ans
- 1. Serving as a tool for academic literacy and meaning-making across subjects
 - 2. Substituting for deeper conceptual understanding of the subject matter
 - 3. Facilitating the memorization of isolated facts without conceptual engagement
 - 4. Acting as a decorative element in completing surface-level classroom tasks

Question ID : 4410091546915
Option 1 ID : 4410096110528
Option 2 ID : 4410096110531
Option 3 ID : 4410096110529
Option 4 ID : 4410096110530

Q.2 A student writes, 'She reading is a book'. The teacher points out the error and models the correct version, 'She is reading a book'. What does this correction illustrate about language as a rule-governed system?

- Ans
- 1. Meanings remain the same despite order.
 - 2. Words must have specific prefixes.
 - 3. Sounds must combine in a set way.
 - 4. Word order is governed by syntactic rules.

Question ID : 4410091683440
Option 1 ID : 4410096640689
Option 2 ID : 4410096640687
Option 3 ID : 4410096640688
Option 4 ID : 4410096640686

Q.3 Which core factor is crucial for successful inter-group performance?

- Ans
- 1. Coordination
 - 2. Conflict management
 - 3. Team building
 - 4. Organizational structure

Question ID : 4410091653509
Option 1 ID : 4410096529374
Option 2 ID : 4410096529375
Option 3 ID : 4410096529377
Option 4 ID : 4410096529376

Q.4 A teacher notices that some peer tutors are giving incorrect explanations during sessions. Based on effective peer tutoring practices, what should the teacher do to address this challenge?

- Ans
- 1. Replace peer tutors with adult volunteers.
 - 2. Provide guidance and monitor sessions to ensure accuracy.
 - 3. Ignore the issue and allow students to self-correct.
 - 4. End peer tutoring and return to lecture-based teaching.

Question ID : 4410091683417
Option 1 ID : 4410096640595
Option 2 ID : 4410096640596
Option 3 ID : 4410096640594
Option 4 ID : 4410096640597

Q.5 A school principal wants to ensure that the Peace Education curriculum leads to a lasting impact on the school environment. Which of the following actions would best demonstrate the successful achievement of Peace Education's objectives among learners?

- Ans
- 1. Students memorizing the peace education syllabus content
 - 2. Students initiate peer-mediation programs to resolve disputes
 - 3. Students submitting reports on famous peace activists
 - 4. Students attending mandatory lectures on conflict resolution

Question ID : 4410091630212
Option 1 ID : 4410096438983
Option 2 ID : 4410096438982
Option 3 ID : 4410096438984
Option 4 ID : 4410096438985

Q.6 Meena feels stressed before public speaking in class. She practices daily check-ins to notice her emotional state and uses mindfulness techniques to manage her anxiety. How does this approach promote self-understanding?

- Ans
- 1. It helps recognize triggers and regulate emotions.
 - 2. It eliminates all nervousness about public speaking.
 - 3. It guarantees improved academic performance.
 - 4. It shifts focus entirely to observing others.

Question ID : 4410091683156
Option 1 ID : 4410096639694
Option 2 ID : 4410096639695
Option 3 ID : 4410096639697
Option 4 ID : 4410096639696

Q.7 A teacher wishes to introduce mindfulness in the classroom by integrating it with regular lessons to enhance student focus and emotional regulation. Which approach best applies mindfulness without disrupting the academic routine?

- Ans
- 1. Embedding short mindful pauses during lesson transitions
 - 2. Conducting mindfulness only during physical education
 - 3. Implementing extended meditation sessions before classes
 - 4. Using mindfulness only as a disciplinary measure

Question ID : 4410091622674
Option 1 ID : 4410096409473
Option 2 ID : 4410096409475
Option 3 ID : 4410096409472
Option 4 ID : 4410096409474

Q.8 Which classroom practice best demonstrates the role of literature in supporting language learners to express personal perspectives?

- Ans
- 1. Inviting students to write responses to literary characters
 - 2. Requiring students to copy sentences from the board
 - 3. Directing students to summarize textbook passages
 - 4. Restricting writing assignments to questions that require factual recall

Question ID : 4410091646601
Option 1 ID : 4410096502645
Option 2 ID : 4410096502647
Option 3 ID : 4410096502646
Option 4 ID : 4410096502648

Q.9 Which teaching approach aligns with the maxim 'simple to complex' in the classroom?

- Ans
- 1. Teaching all concepts randomly.
 - 2. Starting with challenging problems immediately.
 - 3. Focusing only on complex theories.
 - 4. Basic ideas before advanced topics.

Question ID : 4410091608358
Option 1 ID : 4410096352350
Option 2 ID : 4410096352348
Option 3 ID : 4410096352351
Option 4 ID : 4410096352349

Q.10 Which classroom activity best uses literature to support speaking skills?

- Ans
- 1. Copying paragraphs from a storybook
 - 2. Retelling a story in the child's own words
 - 3. Silent reading with no follow-up
 - 4. Memorizing definitions from a dictionary

Question ID : 4410091620357
Option 1 ID : 4410096400244
Option 2 ID : 4410096400246
Option 3 ID : 4410096400243
Option 4 ID : 4410096400245

Q.11 Which approach best helps a diploma student critically analyze a film with social and educational themes for personal self-understanding?

- Ans
- 1. Reflecting on personal reactions to film's messages.
 - 2. Memorizing the film's plot, characters, and key events.
 - 3. Ignoring emotions to concentrate on basic facts.
 - 4. Focusing only on camera angles and sound quality.

Question ID : 4410091624746
Option 1 ID : 4410096417523
Option 2 ID : 4410096417526
Option 3 ID : 4410096417525
Option 4 ID : 4410096417524

Q.12 How can cultural and linguistic backgrounds affect student performance on assessments?

- Ans
- 1. They have no effect on assessment outcomes
 - 2. They may create barriers that impact motivation and success
 - 3. They guarantee equal performance for all students
 - 4. They always improve performance on language tests

Question ID : 4410091682212

Option 1 ID : 4410096636196

Option 2 ID : 4410096636194

Option 3 ID : 4410096636197

Option 4 ID : 4410096636195

Q.13 According to Herbartian approach, the step that follows presentation is:

- Ans
- 1. Stating instructional objectives
 - 2. Comparison and association of ideas
 - 3. Assigning home tasks for reinforcement
 - 4. Testing prior knowledge and understanding

Question ID : 4410091578520

Option 1 ID : 4410096235164

Option 2 ID : 4410096235167

Option 3 ID : 4410096235166

Option 4 ID : 4410096235165

Q.14 What is the primary focus of experiential learning?

- Ans
- 1. Avoiding practical activities
 - 2. Memorizing facts from textbooks only
 - 3. Learning through direct experience and application
 - 4. Listening to lectures without participation

Question ID : 4410091547619

Option 1 ID : 4410096113330

Option 2 ID : 4410096113328

Option 3 ID : 4410096113327

Option 4 ID : 4410096113329

Q.15 A young member of a marginalized caste in a rural area secures a government job through reservation and moves to an urban city. How does this scenario illustrate the interaction between caste and class mobility as described in the context?

- Ans
- 1. Protective discrimination guarantees equal mobility for all
 - 2. Urbanization eliminates all caste-based distinctions
 - 3. Reservations enable limited class ascent within caste constraints
 - 4. Sanskritization as the primary determinant of social status

Question ID : 4410091613187
Option 1 ID : 4410096371585
Option 2 ID : 4410096371583
Option 3 ID : 4410096371582
Option 4 ID : 4410096371584

Q.16 Which theory of language acquisition emphasizes the role of innate biological mechanisms?

- Ans
- 1. Deficit theory
 - 2. Continuity theory
 - 3. Social Interactionist Theory
 - 4. Nativist Theory

Question ID : 4410091682012
Option 1 ID : 4410096635420
Option 2 ID : 4410096635421
Option 3 ID : 4410096635419
Option 4 ID : 4410096635418

Q.17 A student systematically reviews their journal entries to detect recurring patterns in writing style and emotional states. This behaviour is best described as:

- Ans
- 1. Suppressing emotional content to maintain a neutral written style
 - 2. Rehearsing written material for accurate verbatim recall
 - 3. Correcting grammatical errors without meaningful reflection
 - 4. Reflecting on oneself to build personal understanding

Question ID : 4410091543224
Option 1 ID : 4410096095939
Option 2 ID : 4410096095937
Option 3 ID : 4410096095938
Option 4 ID : 4410096095936

Q.18 Identify the option that correctly reflects a central idea associated with the nature of pedagogy.

- Ans
- 1. It describes teaching as a uniform practice across all subject areas
 - 2. It emphasizes guiding learning through intentional classroom processes
 - 3. It limits teachers to predetermined steps in instructional routines
 - 4. It focuses mainly on delivering fixed content without adaptation

Question ID : 4410091542412
Option 1 ID : 4410096092752
Option 2 ID : 4410096092751
Option 3 ID : 4410096092754
Option 4 ID : 4410096092753

Q.19 According to Piaget, how do children learn mathematical concepts?

- Ans
- 1. Through active exploration, hands-on experiences, and constructing their own understanding
 - 2. By listening to lectures only without engaging in activities or experiments
 - 3. By memorizing formulas and rules without practical application or problem solving
 - 4. By copying solutions from textbooks without understanding underlying concepts

Question ID : 4410091544878
Option 1 ID : 4410096102571
Option 2 ID : 4410096102573
Option 3 ID : 4410096102572
Option 4 ID : 4410096102574

Q.20 What was a key learning benefit of using journal writing for students?

- Ans
- 1. Avoid personal experiences
 - 2. Focus only on exams
 - 3. Improve self-reflection
 - 4. Copy content from textbooks

Question ID : 4410091547366
Option 1 ID : 4410096112328
Option 2 ID : 4410096112329
Option 3 ID : 4410096112327
Option 4 ID : 4410096112330

Q.1 Which defense mechanism transforms unacceptable impulses into constructive and socially acceptable behaviors?

- Ans
- 1. Reaction formation
 - 2. Denial
 - 3. Rationalization
 - 4. Sublimation

Question ID : 4410091655735
Option 1 ID : 4410096537906
Option 2 ID : 4410096537907
Option 3 ID : 4410096537904
Option 4 ID : 4410096537905

Q.2 Which of the following best defines active vocabulary?

- Ans
- 1. Words that are only recognized but not used by the learners
 - 2. Words that a person uses regularly in speech and writing
 - 3. Words that are rarely used in the classroom by teachers
 - 4. Words only understood while reading literary texts

Question ID : 4410091695607
Option 1 ID : 4410096688426
Option 2 ID : 4410096688425
Option 3 ID : 4410096688427
Option 4 ID : 4410096688428

Q.3 A school principal regularly observes classroom teaching and later discusses teaching strategies with teachers to improve student learning. This action best reflects which aspect of pedagogical leadership?

- Ans
- 1. Ensuring curriculum coverage and compliance
 - 2. Supporting effective teaching and learning
 - 3. Monitoring teacher performance for accountability
 - 4. Coordinating professional responsibilities of staff

Question ID : 4410091689724
Option 1 ID : 4410096665227
Option 2 ID : 4410096665228
Option 3 ID : 4410096665226
Option 4 ID : 4410096665229

Q.4 An advanced learner analyzes Bollywood dialogues to identify changes in language style based on the situation. What proficiency skill is being developed?

- Ans
- 1. Recognizing contextual shifts in appropriateness
 - 2. Practicing pronunciation accuracy only
 - 3. Memorizing formal English phrases
 - 4. Perfecting grammatical structures in isolation

Question ID : 4410091606586
Option 1 ID : 4410096345345
Option 2 ID : 4410096345347
Option 3 ID : 4410096345346
Option 4 ID : 4410096345344

Q.5 Which statement best captures the core mechanism distinguishing Thorndike's Trial-and-Error learning from Pavlov's Classical Conditioning?

- Ans
- 1. Both processes enhance reflex arcs by repeatedly pairing stimuli, strengthening the connection and prompting stronger, innate instinctive responses.
 - 2. Trial-and-Error relies on response selection via consequences, whereas Classical Conditioning relies on stimulus-stimulus pairing that alters reflexive responses.
 - 3. Trial-and-Error mainly concerns involuntary responses, while Classical Conditioning mainly concerns voluntary, goal-directed actions.
 - 4. Repetitively pairing stimuli strengthens reflex arcs, enhancing connections and eliciting stronger, instinctive responses in both processes involved.

Question ID : 4410091563111
Option 1 ID : 4410096174008
Option 2 ID : 4410096174010
Option 3 ID : 4410096174009
Option 4 ID : 4410096174007

Q.6 Choose the sentence with correct subject-verb agreement.

- Ans
- 1. The student in the class are working quietly
 - 2. The students in the class is working quietly
 - 3. The students in the class are working quietly
 - 4. The student in the class have working quietly

Question ID : 4410091641749
Option 1 ID : 4410096484075
Option 2 ID : 4410096484074
Option 3 ID : 4410096484073
Option 4 ID : 4410096484076

Q.7 When developing a vision of education, which teacher responsibility most contributes to a collaborative school culture?

- Ans
- 1. Following administrative instructions only
 - 2. Focusing on personal professional development
 - 3. Planning lessons independently
 - 4. Participating in shared decision-making with colleagues

Question ID : 4410091606746
Option 1 ID : 4410096345970
Option 2 ID : 4410096345971
Option 3 ID : 4410096345968
Option 4 ID : 4410096345969

Q.8 Students use number cards to form pairs adding up to 20. This method supports:

- Ans
- 1. Activity-based learning
 - 2. Lecture-based instruction
 - 3. Drill work only
 - 4. Memorizing rules

Question ID : 4410091568366
Option 1 ID : 4410096194750
Option 2 ID : 4410096194748
Option 3 ID : 4410096194749
Option 4 ID : 4410096194751

Q.9 When conceiving a new graduate school based on alternative education principles, which feature is most likely emphasized?

- Ans
- 1. Fixed schedules
 - 2. Standardized instruction for all
 - 3. Strict assessment methods
 - 4. Flexible curriculum options

Question ID : 4410091623787
Option 1 ID : 4410096413721
Option 2 ID : 4410096413722
Option 3 ID : 4410096413723
Option 4 ID : 4410096413720

Q.10 Which learning theory best explains how a dog learns to salivate at the sound of a bell after repeatedly hearing it before being fed?

- Ans
- 1. Classical conditioning
 - 2. Cognitive learning
 - 3. Trial and error learning
 - 4. Operant conditioning

Question ID : 4410091609379
Option 1 ID : 4410096356440
Option 2 ID : 4410096356443
Option 3 ID : 4410096356441
Option 4 ID : 4410096356442

Q.11 Which psychological attitude is most important for a good facilitator when supporting diverse learners?

- Ans
- 1. Strictness
 - 2. Indifference
 - 3. Empathy
 - 4. Patience

Question ID : 4410091686894
Option 1 ID : 4410096654400
Option 2 ID : 4410096654401
Option 3 ID : 4410096654398
Option 4 ID : 4410096654399

Q.12 Why do marketers prefer television over print media for advertising to children?

- Ans
- 1. Because television is cheaper than print media
 - 2. Because television reaches children before they develop textual literacy
 - 3. Because print media has more regulations than television
 - 4. Because print media is not available to children

Question ID : 4410091623337
Option 1 ID : 4410096411944
Option 2 ID : 4410096411945
Option 3 ID : 4410096411947
Option 4 ID : 4410096411946

Q.13 A teacher observes that students can now arrange sticks in order from shortest to longest, and can reverse the process by starting from the longest. According to Piaget's theory, which two mathematical abilities are these children demonstrating?

- Ans
- 1. Conservation and Classification
 - 2. Seriation and Reversibility
 - 3. Classification and Assimilation
 - 4. Accommodation and Equilibration

Question ID : 4410091683604
Option 1 ID : 4410096641342
Option 2 ID : 4410096641344
Option 3 ID : 4410096641343
Option 4 ID : 4410096641345

Q.14 A secondary school teacher observes a student who consistently blames classmates for his own mistakes during group tasks. Considering defence mechanisms in the context of cognition and socio-cultural influences, which concept factor best explains the student's behavior?

- Ans
- 1. Rationalization influenced by academic competition
 - 2. Projection shaped by group dynamics
 - 3. Displacement triggered by authority figures
 - 4. Repression caused by peer comparison

Question ID : 4410091628673
Option 1 ID : 4410096432839
Option 2 ID : 4410096432838
Option 3 ID : 4410096432841
Option 4 ID : 4410096432840

Q.15 Arrange the steps chronologically of the teacher as a manager at different phases of teaching:

1. Decision-making to shift from one mode to another
2. Planning the instructional system
3. Analysis of results
4. Pre-teaching phases of the next instructional period

- Ans
- 1. 2-1-3-4
 - 2. 1-2-3-4
 - 3. 2-1-4-3
 - 4. 2-3-1-4

Question ID : 4410091546966
Option 1 ID : 4410096110732
Option 2 ID : 4410096110733
Option 3 ID : 4410096110735
Option 4 ID : 4410096110734

Q.16 A student solving a fractional addition problem erroneously writes. This error pattern most strongly indicates an over-reliance on:

- Ans
- 1. Rote arithmetic calculation
 - 2. Memorized addition algorithm
 - 3. Conceptual sharing models
 - 4. Equivalent fraction methods

Question ID : 4410091558421
Option 1 ID : 4410096156088
Option 2 ID : 4410096156086
Option 3 ID : 4410096156087
Option 4 ID : 4410096156085

Q.17 Which of the following options best describes the process of converting passive vocabulary into active vocabulary?

- Ans
- 1. Memorizing word lists without using them
 - 2. Ignoring words that are difficult to pronounce
 - 3. Only reading and listening to unfamiliar words
 - 4. Consistently using new words in speaking or writing

Question ID : 4410091646927
Option 1 ID : 4410096503976
Option 2 ID : 4410096503975
Option 3 ID : 4410096503974
Option 4 ID : 4410096503973

Q.18 A school leader who coordinates staff meetings, manages parent communication, and maintains organized records is demonstrating:

- Ans
- 1. Classroom facilitation without broader duties of the whole system
 - 2. Administrative organisation and system management
 - 3. Motivating students through targeted strategies
 - 4. Improving classroom teaching only

Question ID : 4410091547891
Option 1 ID : 4410096114397
Option 2 ID : 4410096114396
Option 3 ID : 4410096114398
Option 4 ID : 4410096114395

Q.19 Children insist on buying a toy after watching repeated TV ads. This shows:

- Ans
- 1. Social comparison processes within peer interaction contexts
 - 2. Reinforcement of preference formation through repeated symbolic exposure
 - 3. Dominance of familial authority in shaping consumption decisions
 - 4. Media-induced persuasion influencing consumer choice behavior

Question ID : 4410091568389
Option 1 ID : 4410096194842
Option 2 ID : 4410096194840
Option 3 ID : 4410096194841
Option 4 ID : 4410096194843

Q.20 In what way can schools influence healthy attitudes toward television among students?

- Ans
- 1. Promoting the complete avoidance of television as an outdated medium
 - 2. Limiting discussions about television to ensure classroom focus
 - 3. Incorporating media literacy education into the curriculum
 - 4. Encouraging students to watch only educational channels

Question ID : 4410091642790
Option 1 ID : 4410096488053
Option 2 ID : 4410096488055
Option 3 ID : 4410096488054
Option 4 ID : 4410096488056

Section : Discipline4

Q.1 A teacher uses peer assessment to evaluate student essays. What is a key benefit of this approach?

- Ans
- 1. Reduces teacher workload
 - 2. Increases grading speed
 - 3. Promotes critical thinking
 - 4. Ensures objectivity

Question ID : 4410091637858
Option 1 ID : 4410096468993
Option 2 ID : 4410096468990
Option 3 ID : 4410096468991
Option 4 ID : 4410096468992

Q.2 Justice in education prioritizes what outcome beyond mere resource allocation?

- Ans
- 1. Conformity enforcing collective uniform standards
 - 2. Liberty pursuing individual and community goals
 - 3. Equality without personal value considerations
 - 4. Equity ignoring informed decision capacities

Question ID : 4410091564539
Option 1 ID : 4410096179730
Option 2 ID : 4410096179729
Option 3 ID : 4410096179731
Option 4 ID : 4410096179732

Q.3 Which method is best for assessing students' ability to write clear and logical arguments?

- Ans
- 1. Using peer grading without clear criteria
 - 2. Using rubrics that focus on argument structure
 - 3. Using overall impression rubrics
 - 4. Using checklists of writing parts

Question ID : 4410091623974
Option 1 ID : 4410096414479
Option 2 ID : 4410096414477
Option 3 ID : 4410096414476
Option 4 ID : 4410096414478

Q.4 To promote consistent learning across classrooms, textbooks primarily serve to:

- Ans
- 1. Standardise content delivery through structured curriculum
 - 2. Provide reference material for independent student research
 - 3. Replace direct instruction with self-paced student learning
 - 4. Supplement teacher-designed lessons and activities

Question ID : 4410091548508
Option 1 ID : 4410096116729
Option 2 ID : 4410096116730
Option 3 ID : 4410096116731
Option 4 ID : 4410096116728

Q.5 Inspection and supervision of schools by the Directorate of Primary Education serves as a:

- Ans
- 1. Funding purpose
 - 2. Legal obligation
 - 3. Punitive measure
 - 4. Supporting agency

Question ID : 4410091572451
Option 1 ID : 4410096210743
Option 2 ID : 4410096210742
Option 3 ID : 4410096210741
Option 4 ID : 4410096210740

Q.6 In micro-teaching skill, a student teacher practices the lesson with which of the following?

- Ans
- 1. All classes of the school
 - 2. A small group of students
 - 3. Parents and community
 - 4. The entire school assembly

Question ID : 4410091690313
Option 1 ID : 4410096667532
Option 2 ID : 4410096667530
Option 3 ID : 4410096667533
Option 4 ID : 4410096667531

Q.7 During lesson planning, a teacher must decide how to use textbooks alongside other teaching-learning materials to maximize student understanding. Which approach best represents the effective and balanced use of textbooks in this context?

- Ans
- 1. Avoid linking textbook to material, treating it as a standalone resource.
 - 2. Integrate textbook content with supplementary resources
 - 3. Rely exclusively on the textbook for all instructional content
 - 4. Ignore the textbook and use only external materials for teaching

Question ID : 4410091614669
Option 1 ID : 4410096377488
Option 2 ID : 4410096377486
Option 3 ID : 4410096377485
Option 4 ID : 4410096377487

Q.8 Which challenge often limits meaningful PTA participation in school governance, and how can NGOs address it?

- Ans
- 1. Parents lack interest; NGOs should reduce meetings to once a year
 - 2. SMC legal powers are too expansive; NGOs should lobby to curtail them
 - 3. Teachers resist any parent involvement; NGOs should remove teachers from SMCs
 - 4. Parents face time, literacy, and confidence barriers; NGOs can use inclusive facilitation and visual tools

Question ID : 4410091563899
Option 1 ID : 4410096177177
Option 2 ID : 4410096177178
Option 3 ID : 4410096177179
Option 4 ID : 4410096177180

Q.9 A teacher in a primary Environmental Studies (EVS) classroom wants to help students understand the concept of evaporation. She decides to use a puddle in the schoolyard as a no-cost Teaching-Learning Material (TLM). Which core principle of no-cost TLMs is best demonstrated in this scenario?

- Ans
- 1. Providing structured worksheets
 - 2. Emphasizing digital literacy
 - 3. Connecting to lived experiences
 - 4. Using standardized testing

Question ID : 4410091608844
Option 1 ID : 4410096354297
Option 2 ID : 4410096354298
Option 3 ID : 4410096354296
Option 4 ID : 4410096354299

Q.10 What is the primary aim of promoting justice in social goals within education?

- Ans
- 1. Rewarding only the highest academic achievers
 - 2. Allowing favoritism among selected groups of students
 - 3. Ensuring fair treatment and protection of student rights
 - 4. Encouraging unhealthy competition at all times

Question ID : 4410091687716
Option 1 ID : 4410096657652
Option 2 ID : 4410096657651
Option 3 ID : 4410096657650
Option 4 ID : 4410096657653

Q.11 If a Director of Primary Education wants to foster innovation in teaching practices, which of the following strategies aligns with pedagogical leadership?

- Ans
- 1. Issuing a detailed handbook of innovative techniques
 - 2. Encouraging collaborative lesson planning among teachers
 - 3. Redesigning the teacher appraisal system
 - 4. Offering financial incentives exclusively to teachers

Question ID : 4410091642799

Option 1 ID : 4410096488089

Option 2 ID : 4410096488090

Option 3 ID : 4410096488092

Option 4 ID : 4410096488091

Q.12 A Grade 5 teacher plans a lesson using role-plays where students act out a village council meeting, aiming to deepen their understanding of local governance. Which educational approach is best exemplified in this scenario?

- Ans
- 1. Empirical, discipline-specific social science methodology
 - 2. Value-neutral, data-driven social science inquiry
 - 3. Child-centered, integrated social studies methodology
 - 4. Abstract, theoretical social science instruction

Question ID : 4410091609066

Option 1 ID : 4410096355181

Option 2 ID : 4410096355183

Option 3 ID : 4410096355180

Option 4 ID : 4410096355182

Q.13 Why is the comprehensive assessment of social phenomena fundamentally more challenging than the study of physical science observation?

- Ans
- 1. Non-verifiable material focus
 - 2. Fragmented subject packaging
 - 3. Multidimensional causal plurality
 - 4. Predictable linear behavioral patterns

Question ID : 4410091558870

Option 1 ID : 4410096157866

Option 2 ID : 4410096157868

Option 3 ID : 4410096157867

Option 4 ID : 4410096157865

Q.14 A teacher uses local environmental issues, such as water scarcity, to explain concepts in environmental studies. How does this approach highlight the significance of environmental studies?

- Ans
- 1. Reducing student participation
 - 2. Ignoring curriculum objectives
 - 3. Connecting learning daily life
 - 4. Making learning irrelevant

Question ID : 4410091689807
Option 1 ID : 4410096665536
Option 2 ID : 4410096665537
Option 3 ID : 4410096665535
Option 4 ID : 4410096665534

Q.15 A teacher is designing a curriculum unit for environmental studies that must enhance both ecological literacy and critical thinking skills. Which approach would best integrate the concept and significance of environmental studies into this curriculum?

- Ans
- 1. Integrate textbook content with routine test-based memorization
 - 2. Incorporate inquiry projects linking local issues to global challenges
 - 3. Focus lessons on memorizing environmental laws and regulations
 - 4. Use only nature walks to develop environmental awareness

Question ID : 4410091681798
Option 1 ID : 4410096634566
Option 2 ID : 4410096634567
Option 3 ID : 4410096634568
Option 4 ID : 4410096634569

Q.16 Which of the following is not part of cooperative learning approaches?

- Ans
- 1. To help children value cooperation
 - 2. To go beyond the boundaries of a single subject
 - 3. To empower the young learners
 - 4. To discourage the social context of learners

Question ID : 4410091548119
Option 1 ID : 4410096115186
Option 2 ID : 4410096115188
Option 3 ID : 4410096115185
Option 4 ID : 4410096115187

Q.17 Research on ICT in primary English teaching identifies what as a major challenge in Indian contexts like NEP 2020 implementation?

- Ans
- 1. Minimal need for student-centered activities
 - 2. Lack of teacher training for tool integration
 - 3. Excessive availability of multilingual content
 - 4. Overabundance of classroom hardware resources

Question ID : 4410091564470
Option 1 ID : 4410096179460
Option 2 ID : 4410096179458
Option 3 ID : 4410096179457
Option 4 ID : 4410096179459

Q.18 A teacher evaluates writing by checking ideas, organization, grammar, and vocabulary. This reflects:

- Ans
- 1. Evaluating written work mainly on surface presentation features
 - 2. Judging writing performance using multiple academic and linguistic criteria
 - 3. Measuring writing ability primarily through length and word count
 - 4. Focusing assessment only on content flow while overlooking language rules

Question ID : 4410091570106
Option 1 ID : 4410096201425
Option 2 ID : 4410096201426
Option 3 ID : 4410096201428
Option 4 ID : 4410096201427

Q.19 Which skill is improved through practicing voice modulation and articulation during micro-teaching sessions?

- Ans
- 1. Relating to the student
 - 2. Organization skills
 - 3. Oral presentation skills
 - 4. Effective use of teaching aids

Question ID : 4410091636932
Option 1 ID : 4410096465567
Option 2 ID : 4410096465566
Option 3 ID : 4410096465565
Option 4 ID : 4410096465568

Q.20 What does unit planning primarily involve?

- Ans 1. Organizing linked lessons around one theme
 2. Planning for a single classroom session
 3. Preparing only routine homework tasks
 4. Ignoring the required learning objectives

Question ID : 4410091552938
Option 1 ID : 4410096134077
Option 2 ID : 4410096134076
Option 3 ID : 4410096134079
Option 4 ID : 4410096134078

Section : Discipline5

Q.1 Which of the following options best describes the concept of the social construction of masculinity and femininity?

- Ans 1. They are shaped by cultural and societal influences.
 2. They are solely determined by biology.
 3. They are the same across all cultures.
 4. They do not change over time.

Question ID : 4410091624450
Option 1 ID : 4410096416344
Option 2 ID : 4410096416343
Option 3 ID : 4410096416345
Option 4 ID : 4410096416346

Q.2 What does the term 'social construction of masculinity' primarily refer to?

- Ans 1. Biological differences between men and women
 2. The idea that society shapes expectations for male behavior
 3. Legal rights granted to men
 4. Historical records of male achievements

Question ID : 4410091626597
Option 1 ID : 4410096424761
Option 2 ID : 4410096424760
Option 3 ID : 4410096424763
Option 4 ID : 4410096424762

Q.3 Consider a scenario where a mathematics educator uses a recreational problem involving tiling a chessboard with dominoes, after removing two opposite corners. Which reasoning best explains why such a problem is effective for developing higher-order mathematical skills?

- Ans
- 1. It encourages exploration of parity and problem-solving strategies.
 - 2. It requires memorization of domino placement rules.
 - 3. It focuses on creating artistic patterns using dominoes.
 - 4. It demonstrates all possible tile arrangements visually.

Question ID : 4410091616987
Option 1 ID : 4410096386860
Option 2 ID : 4410096386862
Option 3 ID : 4410096386861
Option 4 ID : 4410096386859

Q.4 A school aims to reduce exclusion for students who struggle with fine or gross motor movements due to neurological or muscular conditions. Which form of inclusion must be prioritized?

- Ans
- 1. Support for social emotional and behavioral disorders
 - 2. Support for language and communication problems
 - 3. Support for motor impairments affecting movement
 - 4. Support for cognitive and learning disabilities

Question ID : 4410091662940
Option 1 ID : 4410096565060
Option 2 ID : 4410096565058
Option 3 ID : 4410096565057
Option 4 ID : 4410096565059

Q.5 Which of the following best describes the role of audio-visual aids in language teaching?

- Ans
- 1. They replace the need for a teacher
 - 2. They are mainly used for assessment
 - 3. They boost engagement and varied learning
 - 4. They are only suitable for advanced learners

Question ID : 4410091616005
Option 1 ID : 4410096382957
Option 2 ID : 4410096382960
Option 3 ID : 4410096382958
Option 4 ID : 4410096382959

Q.6 Which approach best supports addressing inequality and diversity in Indian classrooms?

- Ans
- 1. Assigning the same resources to every student
 - 2. Focusing only on high-achieving students
 - 3. Implementing differentiated instruction strategies
 - 4. Creating identical lesson plans for all students

Question ID : 4410091626734

Option 1 ID : 4410096425299

Option 2 ID : 4410096425298

Option 3 ID : 4410096425296

Option 4 ID : 4410096425297

Q.7 Which example best illustrates inductive reasoning?

- Ans
- 1. Observing repeated events and forming a general conclusion
 - 2. Applying a known law to predict a specific outcome
 - 3. Using a formula to calculate an exact numerical result
 - 4. Following established rules to derive a logical proof

Question ID : 4410091603434

Option 1 ID : 4410096332932

Option 2 ID : 4410096332933

Option 3 ID : 4410096332934

Option 4 ID : 4410096332935

Q.8 What is a critical teacher responsibility when addressing the range of learning difficulties in an inclusive setting?

- Ans
- 1. Monitoring and adjusting support plans regularly
 - 2. Maintaining fixed lesson objectives each term
 - 3. Limiting communication with support staff
 - 4. Restricting support to curriculum content

Question ID : 4410091662984

Option 1 ID : 4410096565229

Option 2 ID : 4410096565230

Option 3 ID : 4410096565232

Option 4 ID : 4410096565231

Q.9 Which outdoor activity mentioned requires an awareness and utilisation of space?

- Ans
- 1. Reading
 - 2. Football
 - 3. Knitting
 - 4. Singing

Question ID : 4410091691294
Option 1 ID : 4410096671367
Option 2 ID : 4410096671366
Option 3 ID : 4410096671368
Option 4 ID : 4410096671369

Q.10 Which of the following tools is used for assessing cognitive or learning disabilities in children?

- Ans
- 1. Standardized intelligence tests
 - 2. Stopwatch
 - 3. Thermometer
 - 4. Weighing scale

Question ID : 4410091555765
Option 1 ID : 4410096145613
Option 2 ID : 4410096145615
Option 3 ID : 4410096145614
Option 4 ID : 4410096145616

Q.11 While planning a unit, a teacher emphasizes the contributions of Indian mathematicians and encourages students to see mathematics as part of their heritage. Which broader aim of mathematics education is the teacher addressing?

- Ans
- 1. Focusing solely on abstraction
 - 2. Teaching only Western mathematics
 - 3. Maximizing test scores
 - 4. Promoting cultural appreciation

Question ID : 4410091619070
Option 1 ID : 4410096395154
Option 2 ID : 4410096395155
Option 3 ID : 4410096395153
Option 4 ID : 4410096395152

Q.12 Dysgraphia is characterized by:

- Ans 1. Poor handwriting and fine motor skill difficulties
 2. Weak memory for short-term and long-term tasks
 3. Difficulty with reading comprehension
 4. Challenges in math calculations and reasoning

Question ID : 4410091572502

Option 1 ID : 4410096210936

Option 2 ID : 4410096210939

Option 3 ID : 4410096210937

Option 4 ID : 4410096210938

Q.13 Which approach best helps analyze both process and product in language assessment?

- Ans 1. Peer review
 2. Observation
 3. Product analysis
 4. Process-product evaluation

Question ID : 4410091635682

Option 1 ID : 4410096460729

Option 2 ID : 4410096460728

Option 3 ID : 4410096460727

Option 4 ID : 4410096460730

Q.14 Participation in science club activities primarily helps learners to:

- Ans 1. Limit learning to classroom periods
 2. Avoid collaborative scientific work
 3. Learn science through exploration
 4. Memorise laboratory procedures mechanically

Question ID : 4410091588799

Option 1 ID : 4410096275863

Option 2 ID : 4410096275862

Option 3 ID : 4410096275861

Option 4 ID : 4410096275860

Q.15 Realizing that $\sqrt{2}$ cannot be written in the form of a ratio of two integers illustrates the concept of:

- Ans 1. Irrational numbers
 2. Whole numbers
 3. Imaginary numbers
 4. Natural numbers

Question ID : 4410091550509
Option 1 ID : 4410096124497
Option 2 ID : 4410096124495
Option 3 ID : 4410096124498
Option 4 ID : 4410096124496

Q.16 A teacher asks students to perform simple experiments using a science kit rather than reading the experiment from the textbook. What does this teaching strategy primarily promote?

- Ans 1. Teacher centered instruction
 2. Active learning and inquiry
 3. Memorization of steps
 4. Only theoretical knowledge

Question ID : 4410091693116
Option 1 ID : 4410096678508
Option 2 ID : 4410096678505
Option 3 ID : 4410096678506
Option 4 ID : 4410096678507

Q.17 Which of the following is NOT one of Bloom's three domains of educational objectives?

- Ans 1. Affective
 2. Psychomotor
 3. Practical
 4. Cognitive

Question ID : 4410091627664
Option 1 ID : 4410096428870
Option 2 ID : 4410096428871
Option 3 ID : 4410096428872
Option 4 ID : 4410096428869

Q.18 Connell's gender order framework posits three primary structures—labor, power, cathexis—interweaving to constrain agency primarily through:

- Ans
- 1. Uniform cultural norms eliminating variability across contexts
 - 2. Recurrent social practices legitimizing unequal power distributions
 - 3. Isolated biological sex differences determining fixed roles universally
 - 4. Individual psychological traits overriding institutional constraints

Question ID : 4410091564683

Option 1 ID : 4410096180311

Option 2 ID : 4410096180309

Option 3 ID : 4410096180308

Option 4 ID : 4410096180310

Q.19 Which technique best allows a teacher to assess both speaking and listening skills in a language classroom?

- Ans
- 1. Guided reading
 - 2. Role-play activity
 - 3. Dictation
 - 4. Listening to an audio clip

Question ID : 4410091616513

Option 1 ID : 4410096384969

Option 2 ID : 4410096384966

Option 3 ID : 4410096384967

Option 4 ID : 4410096384968

Q.20 How can a science club best promote inquiry-based learning?

- Ans
- 1. Student-led experiments
 - 2. Expert demo sessions
 - 3. Data analysis contests
 - 4. Model-building workshops

Question ID : 4410091635733

Option 1 ID : 4410096460919

Option 2 ID : 4410096460920

Option 3 ID : 4410096460921

Option 4 ID : 4410096460922