



GOVT. OF NCT OF DELHI
Delhi Subordinate Services Selection Board
FC-18, Institutional Area, Karkardooma, Delhi – 110092.
www.dsssb.delhigovt.nic.in

Participant ID	[REDACTED]
Participant Name	[REDACTED]
Test Center Name	iON Digital Zone iDZ 1 Sector 62
Test Date	23/02/2026
Test Time	1:00 PM - 3:00 PM
Subject	Assistant Teacher Primary

Section : General Intelligence and Reasoning Ability

Q.1 Select the pair which follows the same pattern as that followed by the two set of pairs given below. Both pairs follow the same pattern.
AEG-JNP
VZB-EIK12991

- Ans
- 1. HKL-PTV
 - 2. HLN-QUW
 - 3. HKL-QUW
 - 4. HLN-PUV

Question ID : 441009767140
Option 1 ID : 4410093022556
Option 2 ID : 4410093022553
Option 3 ID : 4410093022555
Option 4 ID : 4410093022554

Q.2 If 'P' stands for '÷', 'Q' stands for '×', 'R' stands for '+' and 'S' stands for '-', then what will come in place of the question mark '?' in the following equation?

$$36 R 15 Q 12 S 85 P 17 = ?$$

- Ans
- 1. 190
 - 2. 198
 - 3. 211
 - 4. 207

Question ID : 4410091528055
Option 1 ID : 4410096035417
Option 2 ID : 4410096035418
Option 3 ID : 4410096035420
Option 4 ID : 4410096035419

Adda247

Test Prime

ALL EXAMS, ONE SUBSCRIPTION



1,00,000+
Mock Tests



**Personalised
Report Card**



**Unlimited
Re-Attempt**



600+
Exam Covered



25,000+ Previous
Year Papers



500%
Refund



ATTEMPT FREE MOCK NOW

Q.3 Select the correct mirror image of the given combination when the mirror is placed at PQ as shown below.

NSOWPH
P
|
Q

- Ans
- 1. HƆW20N
 - 2. N20MƆH
 - 3. HƆW02N
 - 4. HƆM0SN

Question ID : 44100971776
Option 1 ID : 441009285488
Option 2 ID : 441009285486
Option 3 ID : 441009285485
Option 4 ID : 441009285487

Q.4 What should come in place of the question mark (?) in the given series?
6, 11, 21, 41, 81, ?

- Ans
- 1. 121
 - 2. 161
 - 3. 131
 - 4. 151

Question ID : 441009216184
Option 1 ID : 441009848775
Option 2 ID : 441009848778
Option 3 ID : 441009848776
Option 4 ID : 441009848777

Q.5 Based on the English alphabetical order, three of the following four are alike in a certain way and thus form a group. Which is the one that does not belong to that group?
(Note: The odd man out is not based on the number of consonants/vowels or their position in the letter cluster)

- Ans
- 1. LNK
 - 2. QSO
 - 3. GIE
 - 4. XZV

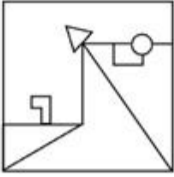
Question ID : 441009777692
Option 1 ID : 4410093064773
Option 2 ID : 4410093064771
Option 3 ID : 4410093064772
Option 4 ID : 4410093064774

Q.6 Select the option figure in which the given figure is embedded as its part (rotation is NOT allowed).

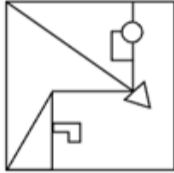


Ans

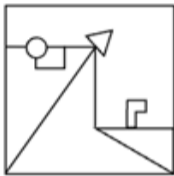
✗ 1.



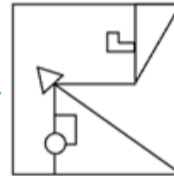
✗ 2.



✗ 3.



✓ 4.



Question ID : 4410091524697
 Option 1 ID : 4410096021997
 Option 2 ID : 4410096021995
 Option 3 ID : 4410096021996
 Option 4 ID : 4410096021998

Q.7 This question is based on the following words.
 GAY FOY FEW SIT

In each of the words, each vowel is changed to the second letter preceding it in the English alphabetical order and each consonant is changed to the letter immediately following it in the English alphabetical order. In how many letter-clusters thus formed, will no vowel appear?⁹⁵⁸⁹

- Ans ✓ 1. Three
 ✗ 2. Two
 ✗ 3. One
 ✗ 4. Four

Question ID : 441009795573
 Option 1 ID : 4410093136293
 Option 2 ID : 4410093136292
 Option 3 ID : 4410093136291
 Option 4 ID : 4410093136294

Q.8 In a certain code language, 'LACE' is coded as '9672' and 'CLAP' is coded as '1279'. What is the code for 'P' in that language?

Ans 1. 1

2. 2

3. 6

4. 7

Question ID : 4410091619045

Option 1 ID : 4410096395052

Option 2 ID : 4410096395054

Option 3 ID : 4410096395053

Option 4 ID : 4410096395055

Q.9 Below are given two sets of numbers. In each set of numbers, a certain mathematical operation on first number results in the second number. Similarly, certain mathematical operation on second number results in the third number and so on. Which of the given options follows the same set of operations as in question?

(NOTE : Operations should be performed on the whole numbers, without breaking down the numbers into its constituent digits. E.g. 13 – Operations on 13 such as adding / subtracting / multiplying etc. to 13 can be performed. Breaking down 13 into 1 and 3 and then performing mathematical operations on 1 and 3 is not allowed.)

43 - 42 - 126 - 135

30 - 29 - 87 - 96

Ans 1. 23 - 23 - 46 - 59

2. 26 - 25 - 125 - 137

3. 32 - 31 - 93 - 102

4. 45 - 43 - 129 - 141

Question ID : 441009528659

Option 1 ID : 4410092070042

Option 2 ID : 4410092070043

Option 3 ID : 4410092070040

Option 4 ID : 4410092070041

Q.10 Which of the following letter-number clusters will replace the question mark (?) in the given series to make it logically complete?
IDL167, CXF144, WRZ121, QLT98, ?

Ans 1. LFN75

2. KFN75

3. KEN75

4. KFM75

Question ID : 4410091618953

Option 1 ID : 4410096394687

Option 2 ID : 4410096394684

Option 3 ID : 4410096394685

Option 4 ID : 4410096394686

Q.11 Refer to the following series and answer the question (all numbers are single digit numbers only. Counting has to be done from left to right)
(Left) 8 2 3 4 7 6 6 3 4 5 6 3 3 8 1 3 6 6 8 9 8 (Right)

How many such odd digits are there each of which is immediately preceded by an odd digit and also immediately followed by an even digit?

- Ans
- 1. Three
 - 2. Two
 - 3. Four
 - 4. One

Question ID : 4410091614567
Option 1 ID : 4410096377083
Option 2 ID : 4410096377082
Option 3 ID : 4410096377084
Option 4 ID : 4410096377081

Q.12 Each letter in the word BAROQUE is changed to the letter immediately following it in the English alphabetical order and then all the letters thus formed are arranged in alphabetical order. Which of the following letters will be fourth from the right in the new group of letters thus formed? 1955

- Ans
- 1. O
 - 2. P
 - 3. F
 - 4. R

Question ID : 441009788081
Option 1 ID : 4410093106326
Option 2 ID : 4410093106324
Option 3 ID : 4410093106323
Option 4 ID : 4410093106325

Q.13 G is the mother of L. L is the sister of U. T is the father of N. N is the husband of U. How is G related to N?

- Ans
- 1. Wife's sister
 - 2. Sister
 - 3. Mother
 - 4. Wife's mother

Question ID : 4410091618997
Option 1 ID : 4410096394861
Option 2 ID : 4410096394863
Option 3 ID : 4410096394862
Option 4 ID : 4410096394860

Q.14 Refer to the following letter series and answer the question. (Counting to be done from left to right only).
(Left) E G I K M O Q A U W Y A C D F H J L N P R T V X Z (Right).
How many such consonants are there, each of which is immediately preceded by a vowel and also immediately followed by a vowel?

- Ans 1. One
 2. Two
 3. Four
 4. Three

Question ID : 441009770869

Option 1 ID : 4410093037470

Option 2 ID : 4410093037471

Option 3 ID : 4410093037469

Option 4 ID : 4410093037472

Q.15 Seven boxes, F, I, L, T, E, R and S, are kept one over the other but not necessarily in the same order. L is kept second from the bottom. Only three boxes are kept between L and F. T is kept at one of the positions below L. Only R is kept between F and S. E is kept at one of the positions above F. How many boxes are kept between I and F?

- Ans 1. Two
 2. Three
 3. Four
 4. One

Question ID : 4410091518828

Option 1 ID : 4410095998591

Option 2 ID : 4410095998592

Option 3 ID : 4410095998593

Option 4 ID : 4410095998590

Q.16 Based on the English alphabetical order, three of the following four letter cluster pairs are alike in a certain way and thus form a group. Which is the one that does not belong to that group?
(Note: The odd one out is not based on the number of consonants/vowels or their position in the letter cluster)4365

- Ans 1. SV - XA
 2. ZB - CH
 3. OR - TW
 4. DG - IL

Question ID : 441009790469

Option 1 ID : 4410093115877

Option 2 ID : 4410093115878

Option 3 ID : 4410093115875

Option 4 ID : 4410093115876

Q.17 T, A, R, G, U and S live on six different floors of the same building. The lowermost floor in the building is numbered 1, the floor above it is numbered 2 and so on till the topmost floor is numbered 6. U lives on the topmost floor. Only three people live between U and S. T lives on a floor below S. A lives on an even numbered floor. G lives on an odd numbered floor but not on floor number 5. How many people live between R and S?

- Ans
- 1. Three
 - 2. Two
 - 3. One
 - 4. Four

Question ID : 4410091614428
 Option 1 ID : 4410096376531
 Option 2 ID : 4410096376530
 Option 3 ID : 4410096376529
 Option 4 ID : 4410096376532

Q.18 A, B, C, D, E and F are sitting around a circular table facing the centre. C sits second to the left of F. A sits to the immediate left of D. E is an immediate neighbour of C. B sits to the immediate right of C. The position of how many person(s) including A will remain unchanged if all persons are arranged in English alphabetical order in clockwise direction starting from A?

- Ans
- 1. One
 - 2. Three
 - 3. Two
 - 4. Four

Question ID : 4410091422277
 Option 1 ID : 4410095618014
 Option 2 ID : 4410095618016
 Option 3 ID : 4410095618015
 Option 4 ID : 4410095618017

Q.19 If 'A' stands for '+', 'B' stands for 'x', 'C' stands for '+' and 'D' stands for '-', what will be come in place of question mark '?' in the following equation?
 $109 C 17 B 4 D 18 A 3 = ? 5675$

- Ans
- 1. 171
 - 2. 169
 - 3. 175
 - 4. 167

Question ID : 441009554140
 Option 1 ID : 4410092171876
 Option 2 ID : 4410092171875
 Option 3 ID : 4410092171877
 Option 4 ID : 4410092171874

Q.20 All 48 people are standing in a row facing north. Sanjay is 30th from the right end while Sanjana is 25th from the left end. How many people are there between Sanjay and Sanjana?

- Ans
- 1. 4
 - 2. 5
 - 3. 2
 - 4. 3

Question ID : 4410091619666
Option 1 ID : 4410096397522
Option 2 ID : 4410096397523
Option 3 ID : 4410096397520
Option 4 ID : 4410096397521

Section : General Awareness

Q.1 Which country rejected a United Nations court order to halt elections in a disputed territory in 2025?

- Ans
- 1. Brazil
 - 2. Chile
 - 3. Venezuela
 - 4. Argentina

Question ID : 441009282265
Option 1 ID : 4410091096947
Option 2 ID : 4410091096949
Option 3 ID : 4410091096946
Option 4 ID : 4410091096948

Q.2 At the time of Independence, how was India's population primarily dependent on agriculture?

- Ans
- 1. A large majority of the population depended on agriculture.
 - 2. Only the urban population depended on agriculture.
 - 3. A small minority of the population depended on agriculture.
 - 4. About half of the population depended on agriculture.

Question ID : 441009510522
Option 1 ID : 4410091997248
Option 2 ID : 4410091997249
Option 3 ID : 4410091997246
Option 4 ID : 4410091997247

Q.3 The modern Periodic Law is based on _____.

- Ans
- 1. Rutherford Scattering Law
 - 2. Bohr's Atomic Law
 - 3. Octave Law
 - 4. Moseley's Law

Question ID : 441009615747
Option 1 ID : 4410092417158
Option 2 ID : 4410092417157
Option 3 ID : 4410092417160
Option 4 ID : 4410092417159

Q.4 Which of the following landforms are commonly found in the Great Indian Desert?

- Ans
- 1. Plateaus and escarpments
 - 2. Deltas and oxbow lakes
 - 3. Moraines and cirques
 - 4. Dunes and playas

Question ID : 441009321784
Option 1 ID : 4410091253338
Option 2 ID : 4410091253336
Option 3 ID : 4410091253335
Option 4 ID : 4410091253337

Q.5 Which policy was introduced by Lord Dalhousie for annexing Indian states?

- Ans
- 1. Doctrine of Lapse
 - 2. Diwani Rights
 - 3. Permanent Settlement
 - 4. Subsidiary Alliance

Question ID : 441009363838
Option 1 ID : 4410091421607
Option 2 ID : 4410091421608
Option 3 ID : 4410091421609
Option 4 ID : 4410091421606

Q.6 Which city in Meghalaya is the starting point of the Greenfield High-Speed Corridor approved by the Union Cabinet in April 2025?

- Ans
- 1. Cherrapunji
 - 2. Nongpoh
 - 3. Mawlyngkhung
 - 4. Tura

Question ID : 441009263411
Option 1 ID : 4410091026114
Option 2 ID : 4410091026113
Option 3 ID : 4410091026112
Option 4 ID : 4410091026111

Q.7 In whose among the following's name is the administration and governance of a state in India carried out?

- Ans
- 1. The Chief Minister
 - 2. The State Cabinet Secretary
 - 3. The Governor
 - 4. The President

Question ID : 441009635616
Option 1 ID : 4410092496613
Option 2 ID : 4410092496614
Option 3 ID : 4410092496612
Option 4 ID : 4410092496611

Q.8 'Ustad Bismillah Khan Yuva Puraskar' is given to the Indian artist of up to _____ of age.

- Ans
- 1. 30 years
 - 2. 40 years
 - 3. 45 years
 - 4. 35 years

Question ID : 441009608201
Option 1 ID : 4410092387923
Option 2 ID : 4410092387922
Option 3 ID : 4410092387924
Option 4 ID : 4410092387921

Q.9 An English newspaper titled Bande Mataram began publication in August 1906 — which among the following personalities initially took charge as its editor?

- Ans
- 1. Bal Gangadhar Tilak
 - 2. Gopal Krishna Gokhale
 - 3. Lala Lajpat Rai
 - 4. Bipin Chandra Pal

Question ID : 4410091551267
Option 1 ID : 4410096127376
Option 2 ID : 4410096127378
Option 3 ID : 4410096127377
Option 4 ID : 4410096127375

Q.10 Which division of the Department of Home, Ministry of Home Affairs, Government of India implemented the scheme 'Relief and Rehabilitation Assistance to Sri Lankan Refugees in the Refugee Camps' in 2018?

- Ans
- 1. Refugee Assistance Division
 - 2. Refugee Relief Division
 - 3. Freedom Fighters and Rehabilitation Division
 - 4. Humanitarian Aid Division

Question ID : 441009628277
Option 1 ID : 4410092467263
Option 2 ID : 4410092467260
Option 3 ID : 4410092467262
Option 4 ID : 4410092467261

Q.11 In August 2025, India conducted a naval exercise in the South China Sea. Which country participated alongside India in this exercise?

- Ans
- 1. Malaysia
 - 2. Japan
 - 3. Philippines
 - 4. Vietnam

Question ID : 4410091564749
Option 1 ID : 4410096180570
Option 2 ID : 4410096180567
Option 3 ID : 4410096180568
Option 4 ID : 4410096180569

Q.12 The Vesara style of temple architecture is a fusion of which two architectural styles?

- Ans
- 1. Dravida and Hoysala
 - 2. Nagara and Dravida
 - 3. Nagara and Kalinga
 - 4. Dravida and Kalinga

Question ID : 441009749150
Option 1 ID : 4410092950430
Option 2 ID : 4410092950429
Option 3 ID : 4410092950427
Option 4 ID : 4410092950428

Q.13 Where was the first Lok Adalat camp held in India?

- Ans 1. Gujarat
 2. Andhra Pradesh
 3. Rajasthan
 4. West Bengal

Question ID : 441009328055
Option 1 ID : 4410091278683
Option 2 ID : 4410091278684
Option 3 ID : 4410091278685
Option 4 ID : 4410091278686

Q.14 During the Southwest Monsoon season, which direction do the monsoon winds primarily blow over the peninsular region?

- Ans 1. From northwest to southeast
 2. From northeast to southwest
 3. From southeast to northwest
 4. From southwest to northeast

Question ID : 441009264918
Option 1 ID : 4410091029715
Option 2 ID : 4410091029712
Option 3 ID : 4410091029713
Option 4 ID : 4410091029714

Q.15 Which of the following Acts enlarged the participation of non-official members in the Central and Provincial Legislative Councils while keeping an official majority intact, and also conferred broader powers on the councils such as debating the budget and interrogating the executive?

- Ans 1. Charter Act, 1853
 2. Regulating Act, 1773
 3. Indian Council Act, 1892
 4. Charter Act, 1833

Question ID : 4410091551307
Option 1 ID : 4410096127550
Option 2 ID : 4410096127548
Option 3 ID : 4410096127547
Option 4 ID : 4410096127549

Q.16 What is the theme of the 2025 G20 Summit?

- Ans
- 1. Global Unity and Prosperity
 - 2. Innovation and Growth
 - 3. Solidarity, Equality, Sustainability
 - 4. Peace and Development

Question ID : 441009282270
Option 1 ID : 4410091096966
Option 2 ID : 4410091096968
Option 3 ID : 4410091096967
Option 4 ID : 4410091096969

Q.17 Where did India conduct the inaugural test of the indigenous Integrated Air Defence Weapon System (IADWS) in August 2025?

- Ans
- 1. Off the coast of Tamil Nadu
 - 2. Off the coast of Maharashtra
 - 3. Off the coast of Goa
 - 4. Off the coast of Odisha

Question ID : 4410091563051
Option 1 ID : 4410096173767
Option 2 ID : 4410096173769
Option 3 ID : 4410096173770
Option 4 ID : 4410096173768

Q.18 Which port in India has been developed to relieve pressure on Mumbai port?

- Ans
- 1. Jawaharlal Nehru Port
 - 2. Visakhapatnam Port
 - 3. Marmagao Port
 - 4. Haldia Port

Question ID : 441009371834
Option 1 ID : 4410091453178
Option 2 ID : 4410091453179
Option 3 ID : 4410091453177
Option 4 ID : 4410091453176

Q.19 Forward genetics is especially useful for identifying _____.

- Ans
- 1. Structural DNA changes
 - 2. Protein stability
 - 3. Chromosome numbers
 - 4. Genes that control phenotypic traits

Question ID : 441009512832
Option 1 ID : 4410092006453
Option 2 ID : 4410092006452
Option 3 ID : 4410092006455
Option 4 ID : 4410092006454

Q.20 The Lok Adalats in India were given statutory status under the Legal Services Authorities Act passed in the year of _____.

- Ans
- 1. 1977
 - 2. 1967
 - 3. 1987
 - 4. 1997

Question ID : 441009328079
Option 1 ID : 4410091278781
Option 2 ID : 4410091278782
Option 3 ID : 4410091278780
Option 4 ID : 4410091278779

Section : Arithmetical and Numerical Ability

Q.1 Anand purchased an item and incurred ₹186 in repair expenses. Subsequently, he sold it to Bharath with a 54% profit. Eventually, Bharath sold the item for ₹6,776, making a 50% loss. What was the total cost price (in ₹) of the item for Anand?

- Ans
- 1. 8,800
 - 2. 8,797
 - 3. 8,803
 - 4. 8,801

Question ID : 441009894681
Option 1 ID : 4410093532794
Option 2 ID : 4410093532797
Option 3 ID : 4410093532795
Option 4 ID : 4410093532796

Q.2 Find the simple interest (in ₹) on ₹3500 as a sum borrowed at 8% per year rate of interest for 5 years.1429

- Ans
- 1. 1440
 - 2. 1340
 - 3. 1360
 - 4. 1400

Question ID : 441009852711
Option 1 ID : 4410093363817
Option 2 ID : 4410093363818
Option 3 ID : 4410093363819
Option 4 ID : 4410093363816

Q.3 P started a software business by investing ₹11000. After four months, Q joined him with a capital of ₹33000. After 4 years, they earned a profit of ₹75900. What was P's share (in ₹, rounded off to the nearest integer) in the profit?5122

Ans 1. 20240

2. 20147

3. 20214

4. 20209

Question ID : 441009898435

Option 1 ID : 4410093547810

Option 2 ID : 4410093547812

Option 3 ID : 4410093547813

Option 4 ID : 4410093547811

Q.4 The LCM of the numbers 7, 2.6 and 0.37 is:

Ans 1. 481

2. 3367

3. 2405

4. 6734

Question ID : 441009525623

Option 1 ID : 4410092057912

Option 2 ID : 4410092057911

Option 3 ID : 4410092057913

Option 4 ID : 4410092057914

Q.5 यदि किसी संख्या का 45%, उसके 20% से 90 अधिक है, तो वह संख्या ज्ञात कीजिए।

Ans 1. 400

2. 340

3. 360

4. 380

Question ID : 441009856964

Option 1 ID : 4410093380829

Option 2 ID : 4410093380831

Option 3 ID : 4410093380828

Option 4 ID : 4410093380830

Q.6 If Akram walks at 4 km/hr, he misses his train by 3 minutes. If, however, Akram walks at 5 km/hr, he reaches station 3 minutes before the arrival of the train. The distance covered by Akram to reach the station is:

- Ans
- 1. 2.8 km
 - 2. 3 km
 - 3. 2 km
 - 4. 1.5 km

Question ID : 441009986522
Option 1 ID : 4410093898379
Option 2 ID : 4410093898380
Option 3 ID : 4410093898378
Option 4 ID : 4410093898377

Q.7 A shopkeeper uses a false weight of 500 g but sells it as 1 kg at cost price. What is his profit percentage?

- Ans
- 1. 80%
 - 2. 90%
 - 3. 100%
 - 4. 50%

Question ID : 4410091546384
Option 1 ID : 4410096108416
Option 2 ID : 4410096108417
Option 3 ID : 4410096108418
Option 4 ID : 4410096108415

Q.8 A hollow spherical shell is made of a metal of density 36 g/cm^3 . Its internal and external radius are 3 cm and 6 cm, respectively. What is the weight (in kg) of the shell?

(Take $\pi = \frac{22}{7}$)

- Ans
- 1. 25.512
 - 2. 30.39
 - 3. 29.72
 - 4. 28.512

Question ID : 441009621400
Option 1 ID : 4410092439734
Option 2 ID : 4410092439735
Option 3 ID : 4410092439733
Option 4 ID : 4410092439732

Q.9 Simplify: $(12 \div 8) \times 8$

- Ans
- 1. 14
 - 2. 13
 - 3. 16
 - 4. 12

Question ID : 441009521678
Option 1 ID : 4410092042132
Option 2 ID : 4410092042133
Option 3 ID : 4410092042134
Option 4 ID : 4410092042131

Q.10 A pipe can fill a tank in 12 hours. Another pipe can empty the filled tank in 21 hours. If both the pipes are opened simultaneously, then the time (in hours) in which the tank will be filled is:

- Ans
- 1. 30
 - 2. 28
 - 3. 29
 - 4. 31

Question ID : 441009194611
Option 1 ID : 441009766393
Option 2 ID : 441009766391
Option 3 ID : 441009766392
Option 4 ID : 441009766394

Q.11 The difference between compound interest, compounded annually, and simple interest on a certain sum of money at 10% per annum for 3 years is ₹5,084. Find the principal amount.

- Ans
- 1. ₹1,74,000
 - 2. ₹1,46,000
 - 3. ₹1,92,000
 - 4. ₹1,64,000

Question ID : 44100944449
Option 1 ID : 441009177042
Option 2 ID : 441009177041
Option 3 ID : 441009177040
Option 4 ID : 441009177039

Q.12 A dealer purchases an air cooler listed at ₹12,000. He gets a trade discount of 25%. If he pays immediately, he receives an additional cash discount of 10% on the reduced price. What is the final price he has to pay?

- Ans
- 1. ₹7,800
 - 2. ₹8,400
 - 3. ₹8,250
 - 4. ₹8,100

Question ID : 4410091546498
Option 1 ID : 4410096108875
Option 2 ID : 4410096108878
Option 3 ID : 4410096108877
Option 4 ID : 4410096108876

Q.13 A and B invest ₹30,000 and ₹24,000, respectively, for one year. If they get a profit of ₹13,500, then the share of B in the profit is:

- Ans
- 1. ₹6,000
 - 2. ₹7,500
 - 3. ₹9,000
 - 4. ₹9,450

Question ID : 441009194362
Option 1 ID : 441009765395
Option 2 ID : 441009765396
Option 3 ID : 441009765397
Option 4 ID : 441009765398

Q.14 A class consists of 40 students. The average marks of boys are 75, and the average marks of girls are 65. If the overall average marks of the class are 70, how many boys are there in the class?

- Ans
- 1. 24
 - 2. 20
 - 3. 18
 - 4. 22

Question ID : 441009208943
Option 1 ID : 441009821057
Option 2 ID : 441009821055
Option 3 ID : 441009821058
Option 4 ID : 441009821056

Q.15 A cone has a curved surface area equal to 132 cm^2 , and its radius is 6 cm. Find its slant height.

$$\left(\text{Use } \pi = \frac{22}{7} \right)$$

- Ans 1.7 cm
 2.8 cm
 3.75 cm
 4.65 cm

Question ID : 441009125597
Option 1 ID : 441009499232
Option 2 ID : 441009499231
Option 3 ID : 441009499234
Option 4 ID : 441009499233

Q.16 The distance between A and B is 1,395 km. From A, Garvit goes to B with a speed of 75 km/hr and return to A with a speed of 132 km/hr. Find the average speed of Garvit. (Rounded off to two decimal places)

- Ans 1.95.65 km/hr
 2.90.54 km/hr
 3.95.54 km/hr
 4.98.68 km/hr

Question ID : 441009209086
Option 1 ID : 441009821627
Option 2 ID : 441009821628
Option 3 ID : 441009821630
Option 4 ID : 441009821629

Q.17 The given pie-chart shows number of hours spent (in degree) by a schoolboy on different activities on a working day.

Study the pie-chart and answer the question that follows.



How many hours were spent by a schoolboy in sleeping?

- Ans
- 1.5
 - 2.7
 - 3.3
 - 4.9

Question ID : 4410095714
Option 1 ID : 44100922635
Option 2 ID : 44100922636
Option 3 ID : 44100922634
Option 4 ID : 44100922637

Q.18 A garrison of 1204 men has provisions for 22 days. How long (in days) will the provisions last if the garrison is increased to 1892 men?

- Ans
- 1.14
 - 2.13
 - 3.16
 - 4.15

Question ID : 441009522871
Option 1 ID : 4410092046903
Option 2 ID : 4410092046904
Option 3 ID : 4410092046906
Option 4 ID : 4410092046905

Q.19 A solid is in the shape of a cone standing on a hemisphere with both their radii being equal to 1 cm and the height of the cone equal to its radius. What will be the volume of the solid? ($\pi=3.14$)686

- Ans
- 1. 41.4 cm³
 - 2. 31.4 cm³
 - 3. 4.14 cm³
 - 4. 3.14 cm³

Question ID : 441009621254
Option 1 ID : 4410092439150
Option 2 ID : 4410092439148
Option 3 ID : 4410092439151
Option 4 ID : 4410092439149

Q.20 As a result of processing 48 tons of second-grade material containing 35% impurity, 40 tons of first-grade material is obtained. What is the percentage of impurity in the first-grade material, given that the quantity of pure material remains the same in both grades?

- Ans
- 1. 27%
 - 2. 25%
 - 3. 22%
 - 4. 20%

Question ID : 441009288296
Option 1 ID : 4410091120177
Option 2 ID : 4410091120176
Option 3 ID : 4410091120175
Option 4 ID : 4410091120178

Section : English Language and Comprehension

Q.1 Select the most appropriate option to fill in the blank.

Kalpana participated _____ two space shuttle missions.

- Ans
- 1. in
 - 2. by
 - 3. on
 - 4. about

Question ID : 4410091524575
Option 1 ID : 4410096021526
Option 2 ID : 4410096021524
Option 3 ID : 4410096021523
Option 4 ID : 4410096021525

Q.2 Substitute the underlined part of the following sentence by choosing the correct idiom.

Ever since the financial irregularities were discovered, the manager has been dealing with the situation as it develops without a prearranged plan.

- Ans
- 1. calling the shots
 - 2. playing by ear
 - 3. over the moon
 - 4. acting on impulse

Question ID : 4410091132098
Option 1 ID : 4410094463797
Option 2 ID : 4410094463799
Option 3 ID : 4410094463798
Option 4 ID : 4410094463796

Q.3 Select the option that is the most appropriate antonym of the highlighted word in the given sentence.

The alien plant species spread quickly.

- Ans
- 1. exotic
 - 2. indigenous
 - 3. imported
 - 4. unfamiliar

Question ID : 4410091603230
Option 1 ID : 4410096332117
Option 2 ID : 4410096332116
Option 3 ID : 4410096332118
Option 4 ID : 4410096332119

Q.4 In the given question, a sentence is divided into different segments. The first segment (S1) is fixed. Choose the most appropriate order from the options given which best rearranges the remaining segments to form a coherent sentence.

S1: Although the committee had initially dismissed
P: supported by detailed surveys and
Q: to approve a pilot project in two neighbouring districts
R: the proposal as overly ambitious, the revised plan—
S: community feedback—eventually convinced its members

- Ans
- 1. RPSQ
 - 2. PSQR
 - 3. SQRP
 - 4. QSRP

Question ID : 4410091525472
Option 1 ID : 4410096025052
Option 2 ID : 4410096025053
Option 3 ID : 4410096025051
Option 4 ID : 4410096025050

Q.5 Fill in the blank with the correctly spelt word.

Vikram felt _____ to attend the prestigious university ceremony.

- Ans
- 1. priviledged
 - 2. privileged
 - 3. previlaged
 - 4. prilivaged

Question ID : 4410091048246
Option 1 ID : 4410094142013
Option 2 ID : 4410094142012
Option 3 ID : 4410094142014
Option 4 ID : 4410094142011

Q.6 Select the most appropriate article to fill in the blank. If no article is needed, select 'No article required'.

After walking for hours, they finally reached ___ summit of Mount Everest.

- Ans
- 1. an
 - 2. a
 - 3. the
 - 4. No article required

Question ID : 4410091481645
Option 1 ID : 4410095853647
Option 2 ID : 4410095853646
Option 3 ID : 4410095853648
Option 4 ID : 4410095853649

Q.7 Complete the following sentence with the most appropriate option.

There are only _____ students present in the computer class today.

- Ans
- 1. a few
 - 2. little
 - 3. much
 - 4. many

Question ID : 4410091307980
Option 1 ID : 4410095163581
Option 2 ID : 4410095163582
Option 3 ID : 4410095163579
Option 4 ID : 4410095163580

Q.8 Substitute the underlined segment of the following sentence by choosing the correct idiom.

I agree with your idea, but let me take a position I don't necessarily agree with, purely for the sake of argument. I'll point out a few possible flaws in your plan to test its strength.

- Ans
- 1. take the high road
 - 2. drag your feet
 - 3. play devil's advocate
 - 4. beat around the bush

Question ID : 4410091132104
Option 1 ID : 4410094463820
Option 2 ID : 4410094463823
Option 3 ID : 4410094463821
Option 4 ID : 4410094463822

Q.9 In the following question, a statement divided into different segments is given. Rearrange all the segments to form a coherent statement.

- A. period in late spring or early summer
- B. eating high-calorie seal blubber, killing one seal
- C. by building up a thick layer of fat from
- D. polar bears survive sub zero winter temperatures and summer
- E. every three to five days during their heavy feeding

- Ans
- 1. D-C-B-E-A
 - 2. B-A-D-C-E
 - 3. E-D-B-C-A
 - 4. C-D-A-E-B

Question ID : 4410091526219
Option 1 ID : 4410096027998
Option 2 ID : 4410096028000
Option 3 ID : 4410096027999
Option 4 ID : 4410096028001

Q.10 Choose the option which best replaces the underlined text.

The manager appreciated her for always following the practice of avoiding waste by careful use of resources.

- Ans
- 1. frugality
 - 2. propriety
 - 3. dexterity
 - 4. ingenuity

Question ID : 4410091525500
Option 1 ID : 4410096025162
Option 2 ID : 4410096025165
Option 3 ID : 4410096025163
Option 4 ID : 4410096025164

Q.11 Complete the following sentence with the most appropriate option.

Though he made _____ progress, it was enough to impress the examiner.

- Ans
- 1. little
 - 2. a little
 - 3. any
 - 4. much

Question ID : 4410091307986
Option 1 ID : 4410095163603
Option 2 ID : 4410095163604
Option 3 ID : 4410095163605
Option 4 ID : 4410095163606

Q.12 Choose the option that expresses the antonym of 'obsequious' as used in the sentence.

The manager preferred honest feedback over the obsequious compliments offered by some employees trying to gain favour.

- Ans
- 1. servile
 - 2. lucid
 - 3. obstinate
 - 4. flattering

Question ID : 4410091526885
Option 1 ID : 4410096030650
Option 2 ID : 4410096030653
Option 3 ID : 4410096030652
Option 4 ID : 4410096030651

Q.13 Complete the sentence with a suitable article.

She placed _____ latest book on the table before leaving the room.

- Ans
- 1. No article
 - 2. a
 - 3. an
 - 4. the

Question ID : 4410091696248
Option 1 ID : 4410096690897
Option 2 ID : 4410096690894
Option 3 ID : 4410096690895
Option 4 ID : 4410096690896

Q.14 Identify the word which is not spelt correctly.
The scientist provided a plausable explanation for the anomalous experimental results.

- Ans
- 1. anomalous
 - 2. experimental
 - 3. explanation
 - 4. plausable

Question ID : 4410091555154
Option 1 ID : 4410096143256
Option 2 ID : 4410096143258
Option 3 ID : 4410096143257
Option 4 ID : 4410096143255

Q.15 Select the option that can be used as a one-word substitute for the given group of words.

One who compiles a dictionary

- Ans
- 1. Author
 - 2. Autobiographer
 - 3. Lexicographer
 - 4. Interpreter

Question ID : 441009432247
Option 1 ID : 4410091688507
Option 2 ID : 4410091688506
Option 3 ID : 4410091688508
Option 4 ID : 4410091688509

Comprehension:

Read the passage carefully and answer the following questions.

Power foods are foods that provide rich levels of nutrients like fibre, potassium and minerals. With people becoming increasingly health conscious today, a lot of fitness trainers encourage their clients to include these foods in their daily diet to increase muscle development. There are various ways of incorporating power foods in your daily diet. Of course, the key to enjoying power foods is proper preparation of these foods, the use of season-fresh foods and indentifying your choice of flavour among power foods. Some of the recommended power food combinations are those that are prepared in our kitchens on a regular basis. Take, for instance, the combination of chickpeas and onions.

This combination is a powerful source of iron which is required by the body to transport oxygen to its various parts. Iron deficiency can lead to anaemia, fatigue, brain fog and tiredness. A study by the Journal of Agricultural and Food Chemistry says that sulphur compounds in onion and garlic help in the absorption of iron and zinc from chickpeas. The combination is a hit with teenagers, who need to be diligent about getting iron in their diet. A quick way to prepare this power food is to make a chickpea salad with chopped onions, chaat masala and dhania.

SubQuestion No : 16

Q.16 According to the passage, the combination of chick peas and onion is a powerful source of which mineral?

- Ans
- 1. Zinc
 - 2. Carbon
 - 3. Iron
 - 4. Sulphur

Question ID : 4410091529423
Option 1 ID : 4410096040793
Option 2 ID : 4410096040794
Option 3 ID : 4410096040791
Option 4 ID : 4410096040792



Comprehension:

Read the passage carefully and answer the following questions.

Power foods are foods that provide rich levels of nutrients like fibre, potassium and minerals. With people becoming increasingly health conscious today, a lot of fitness trainers encourage their clients to include these foods in their daily diet to increase muscle development. There are various ways of incorporating power foods in your daily diet. Of course, the key to enjoying power foods is proper preparation of these foods, the use of season-fresh foods and indentifying your choice of flavour among power foods. Some of the recommended power food combinations are those that are prepared in our kitchens on a regular basis. Take, for instance, the combination of chickpeas and onions.

This combination is a powerful source of iron which is required by the body to transport oxygen to its various parts. Iron deficiency can lead to anaemia, fatigue, brain fog and tiredness. A study by the Journal of Agricultural and Food Chemistry says that sulphur compounds in onion and garlic help in the absorption of iron and zinc from chickpeas. The combination is a hit with teenagers, who need to be diligent about getting iron in their diet. A quick way to prepare this power food is to make a chickpea salad with chopped onions, chaat masala and dhania.

SubQuestion No : 17

Q.17 Select the most appropriate antonym of Diligent.

- Ans
- 1. Injurious
 - 2. Incessant
 - 3. Indecent
 - 4. Indifferent

Question ID : 4410091529424
Option 1 ID : 4410096040798
Option 2 ID : 4410096040796
Option 3 ID : 4410096040797
Option 4 ID : 4410096040795



Comprehension:

Read the passage carefully and answer the following questions.

Power foods are foods that provide rich levels of nutrients like fibre, potassium and minerals. With people becoming increasingly health conscious today, a lot of fitness trainers encourage their clients to include these foods in their daily diet to increase muscle development. There are various ways of incorporating power foods in your daily diet. Of course, the key to enjoying power foods is proper preparation of these foods, the use of season-fresh foods and indentifying your choice of flavour among power foods. Some of the recommended power food combinations are those that are prepared in our kitchens on a regular basis. Take, for instance, the combination of chickpeas and onions.

This combination is a powerful source of iron which is required by the body to transport oxygen to its various parts. Iron deficiency can lead to anaemia, fatigue, brain fog and tiredness. A study by the Journal of Agricultural and Food Chemistry says that sulphur compounds in onion and garlic help in the absorption of iron and zinc from chickpeas. The combination is a hit with teenagers, who need to be diligent about getting iron in their diet. A quick way to prepare this power food is to make a chickpea salad with chopped onions, chaat masala and dhania.

SubQuestion No : 18

Q.18 Select the most appropriate tone of the passage.

- Ans
- 1. Cynical
 - 2. Cautionary
 - 3. Expository
 - 4. Pessimistic

Question ID : 4410091529425
Option 1 ID : 4410096040802
Option 2 ID : 4410096040801
Option 3 ID : 4410096040799
Option 4 ID : 4410096040800



Comprehension:

Read the passage carefully and answer the following questions.

Power foods are foods that provide rich levels of nutrients like fibre, potassium and minerals. With people becoming increasingly health conscious today, a lot of fitness trainers encourage their clients to include these foods in their daily diet to increase muscle development. There are various ways of incorporating power foods in your daily diet. Of course, the key to enjoying power foods is proper preparation of these foods, the use of season-fresh foods and indentifying your choice of flavour among power foods. Some of the recommended power food combinations are those that are prepared in our kitchens on a regular basis. Take, for instance, the combination of chickpeas and onions.

This combination is a powerful source of iron which is required by the body to transport oxygen to its various parts. Iron deficiency can lead to anaemia, fatigue, brain fog and tiredness. A study by the Journal of Agricultural and Food Chemistry says that sulphur compounds in onion and garlic help in the absorption of iron and zinc from chickpeas. The combination is a hit with teenagers, who need to be diligent about getting iron in their diet. A quick way to prepare this power food is to make a chickpea salad with chopped onions, chaat masala and dhania.

SubQuestion No : 19

Q.19 Select the most appropriate title for the passage.

- Ans**
- 1. Potential Health Benefits of Nutritive Diet
 - 2. History of Power Foods
 - 3. Power Foods: Key to Healthy Living
 - 4. Power Foods: Role in Dissemination of Diseases

Question ID : 4410091529426

Option 1 ID : 4410096040806

Option 2 ID : 4410096040804

Option 3 ID : 4410096040805

Option 4 ID : 4410096040803

Comprehension:

Read the passage carefully and answer the following questions.

Power foods are foods that provide rich levels of nutrients like fibre, potassium and minerals. With people becoming increasingly health conscious today, a lot of fitness trainers encourage their clients to include these foods in their daily diet to increase muscle development. There are various ways of incorporating power foods in your daily diet. Of course, the key to enjoying power foods is proper preparation of these foods, the use of season-fresh foods and indentifying your choice of flavour among power foods. Some of the recommended power food combinations are those that are prepared in our kitchens on a regular basis. Take, for instance, the combination of chickpeas and onions.

This combination is a powerful source of iron which is required by the body to transport oxygen to its various parts. Iron deficiency can lead to anaemia, fatigue, brain fog and tiredness. A study by the Journal of Agricultural and Food Chemistry says that sulphur compounds in onion and garlic help in the absorption of iron and zinc from chickpeas. The combination is a hit with teenagers, who need to be diligent about getting iron in their diet. A quick way to prepare this power food is to make a chickpea salad with chopped onions, chaat masala and dhania.

SubQuestion No : 20

Q.20 Which of the following statements is not true in the context of the passage?

- Ans** ✓ 1. Sulphur compounds in onion and lemon help in absorption of iron & zinc.
 ✗ 2. Power foods are easily available in the kitchen.
 ✗ 3. Iron deficiency can lead to anaemia and fatigue.
 ✗ 4. Power foods provide multnutrients to the body.

Question ID : 4410091529427
 Option 1 ID : 4410096040809
 Option 2 ID : 4410096040808
 Option 3 ID : 4410096040810
 Option 4 ID : 4410096040807

Section : Hindi Language and Comprehension

Q.1 "सैनिक सीमा पर पूरी तत्परता से डटे _____ थे।" रिक्त स्थान की पूर्ति उचित क्रिया शब्द से करें।

- Ans** ✗ 1. रहना
 ✗ 2. जाना
 ✓ 3. हुए
 ✗ 4. होते

Question ID : 4410091288110
 Option 1 ID : 4410095084301
 Option 2 ID : 4410095084303
 Option 3 ID : 4410095084302
 Option 4 ID : 4410095084300

Q.2 'अपने झोपड़े की खैर मनाओ' लोकोक्ति का क्या अर्थ है?

- Ans
- 1. अपनी कुशल देखो
 - 2. अपनी बुराई नहीं देखना
 - 3. कृतज्ञता भाव न रखना
 - 4. हमेशा और अधिक पाने की लालसा रखना

Question ID : 4410091547200

Option 1 ID : 4410096111671

Option 2 ID : 4410096111673

Option 3 ID : 4410096111674

Option 4 ID : 4410096111672

Q.3 'आँख के आगे नाक, सूझे क्या खाक' लोकोक्ति का सही अर्थ क्या है?

- Ans
- 1. अनायास कोई वस्तु मिल जाना
 - 2. आँख पर परदा पड़ा होने पर कुछ समझ नहीं आता
 - 3. जिसने जो वस्तु नहीं देखी, वह उसका आनंद नहीं ले सकता
 - 4. जहाँ मुखिया मूर्ख हो, वहाँ अन्याय होता है

Question ID : 4410091626265

Option 1 ID : 4410096423449

Option 2 ID : 4410096423451

Option 3 ID : 4410096423452

Option 4 ID : 4410096423450

Q.4 'अपना हाथ जगन्नाथ' लोकोक्ति का क्या अर्थ है?

- Ans
- 1. स्वयं द्वारा संपादित कार्य फलदायक होता है
 - 2. सभी अपने जैसे दिखाई देना
 - 3. संपूर्ण लाभ स्वयं उठाना
 - 4. अपनी प्रतिष्ठा की सुरक्षा अपने हाथ

Question ID : 4410091547209

Option 1 ID : 4410096111707

Option 2 ID : 4410096111710

Option 3 ID : 4410096111709

Option 4 ID : 4410096111708

Q.5 निम्नलिखित वाक्य के रिक्त स्थान में उचित विशेषण शब्द का प्रयोग करें -
'उस पहाड़ी पर फूल लगे हैं।'

- Ans
- 1. गोरा
 - 2. भला
 - 3. डरपोक
 - 4. सुन्दर

Question ID : 4410091242824

Option 1 ID : 4410094904638

Option 2 ID : 4410094904637

Option 3 ID : 4410094904636

Option 4 ID : 4410094904635

Q.6 दिए गए वाक्य में गुणवाचक विशेषण का चयन करके रिक्त स्थान की पूर्ति करें-
परियोजना के संचालन के लिए तकनीकी और प्रबंधन क्षेत्रों में ----- व्यक्तियों को नियुक्त किया गया।

- Ans 1. योग्य
 2. सैकड़ों
 3. अधिक
 4. कई

Question ID : 4410091547169
 Option 1 ID : 4410096111551
 Option 2 ID : 4410096111549
 Option 3 ID : 4410096111550
 Option 4 ID : 4410096111552

Q.7 दिए गए गद्य को सही क्रम में लगाइए।
(1)किसी व्यक्ति का (2)इंतज़ार नहीं करना पड़ता (3)के लिए (4)अब हमें किसी तथ्य या परिभाषा

- Ans 1. 4 3 1 2
 2. 1 2 3 4
 3. 3 4 2 1
 4. 4 3 2 1

Question ID : 4410091333045
 Option 1 ID : 4410095263798
 Option 2 ID : 4410095263797
 Option 3 ID : 4410095263796
 Option 4 ID : 4410095263799

Q.8 निम्न में से वाक्य में रेखांकित शब्द का विलोम शब्द कौन-सा है ?
'कबीर निर्गुण संप्रदाय के विरोधी हैं।'

- Ans 1. अनुभवहीन
 2. नास्तिक
 3. अनुयायी
 4. अनास्था

Question ID : 4410091626544
 Option 1 ID : 4410096424549
 Option 2 ID : 4410096424550
 Option 3 ID : 4410096424548
 Option 4 ID : 4410096424551

Q.9 निम्न में से 'ऊँची दुकान फीके पकवान' लोकोक्ति का सही अर्थ कौन है?

- Ans 1. केवल बाह्य प्रदर्शन
 2. घमंड करने से नाश होता है
 3. उत्तम वस्तु थोड़ी भी अच्छी
 4. ऊँचे आदमी के सब दोस्त हैं

Question ID : 4410091526618
 Option 1 ID : 4410096029590
 Option 2 ID : 4410096029591
 Option 3 ID : 4410096029593
 Option 4 ID : 4410096029592

Q.10 निम्नांकित विकल्पों में से उचित कारक चिन्ह का चयन करके वाक्य पूर्ण करें-
 पिता जी ने मुझे किताब लाने _____ बाजार भेजा।

- Ans 1. के
 2. का लिए
 3. को लिए
 4. के लिए

Question ID : 4410091254710
 Option 1 ID : 4410094951822
 Option 2 ID : 4410094951825
 Option 3 ID : 4410094951824
 Option 4 ID : 4410094951823

Q.11 निम्नलिखित वाक्य में रेखांकित शब्द के पर्यायवाची शब्द का चयन दिए गए विकल्पों में से कीजिए-
 'मोती' निकालने के लिए तो समुद्र में जाना ही पड़ेगा।

- Ans 1. मणि
 2. मुकुर
 3. मरकत
 4. मुक्ता

Question ID : 4410091618541
 Option 1 ID : 4410096393038
 Option 2 ID : 4410096393035
 Option 3 ID : 4410096393037
 Option 4 ID : 4410096393036

Q.12 सही वाक्य-क्रम वाले वाक्य का चयन कीजिए-

- Ans 1. बैल / की / गर्दन / पर / कौआ / बैठा / है
 2. गर्दन / पर / बैठा / है / की / बैल / कौआ
 3. की / कौआ / बैल / गर्दन / पर / बैठा / है
 4. बैठा / है / कौआ / पर / बैल / की / गर्दन

Question ID : 441009477100
 Option 1 ID : 4410091863811
 Option 2 ID : 4410091863810
 Option 3 ID : 4410091863812
 Option 4 ID : 4410091863809

Q.13 'आस्तीन का साँप' मुहावरे का सही अर्थ क्या होगा?

- Ans
- 1. मरने के करीब होना
 - 2. कोई कसर न छोड़ना
 - 3. विश्वासघाती मित्र
 - 4. नष्ट करना

Question ID : 4410091624054

Option 1 ID : 4410096414797

Option 2 ID : 4410096414799

Option 3 ID : 4410096414796

Option 4 ID : 4410096414798

Q.14 उपयुक्त कारक चिह्न का चयन कर दिए गए वाक्य को पूर्ण कीजिए।
यह सोनमस्कूटी है।

- Ans
- 1. के
 - 2. को
 - 3. की
 - 4. से

Question ID : 4410091304947

Option 1 ID : 4410095151835

Option 2 ID : 4410095151834

Option 3 ID : 4410095151836

Option 4 ID : 4410095151833

Q.15 'गोबर-गणेश हो जाना' मुहावरे का सही अर्थ क्या होगा ?

- Ans
- 1. झगड़ल होना
 - 2. सुस्त या मूर्ख होना
 - 3. धार्मिक होना
 - 4. न्यायप्रिय होना

Question ID : 4410091629430

Option 1 ID : 4410096435813

Option 2 ID : 4410096435812

Option 3 ID : 4410096435810

Option 4 ID : 4410096435811

Comprehension:

दिए गए गद्यांश को पढ़कर नीचे लिखे प्रश्नों के उत्तर दीजिए।

प्राकृतिक संसाधन मानव समाज के अस्तित्व और आर्थिक विकास के लिए अनिवार्य हैं। जल, मिट्टी, खनिज, वन और ऊर्जा जैसे संसाधन सीमित हैं, फिर भी आधुनिक जीवनशैली और बढ़ती जनसंख्या ने इन पर अत्यधिक दबाव डाल दिया है। अनियंत्रित खनन, वनों की कटाई, जल प्रदूषण और जीवाश्म ईंधन पर अत्यधिक निर्भरता न केवल संसाधनों की कमी बल्कि पारिस्थितिक तंत्र में असंतुलन का कारण बन रही है। संसाधनों के संरक्षण के लिए वैज्ञानिक और प्रबंधकीय दृष्टिकोण आवश्यक है। जल संरक्षण के लिए वर्षा जल संचयन, जल पुनर्चक्रण की तकनीक अपनाई जानी चाहिए। भूमि की उर्वरता बनाए रखने के लिए सतत कृषि पद्धतियों और जैविक उर्वरकों का प्रयोग जरूरी है। ऊर्जा क्षेत्र में अक्षय स्रोतों—सौर, पवन और जलविद्युत—को प्राथमिकता देनी चाहिए। इसके अतिरिक्त, नीति निर्माण, कानूनी संरचना और जन जागरूकता भी संरक्षण की दिशा में निर्णायक भूमिका निभाती हैं। यदि हम संसाधनों का विवेकपूर्ण उपयोग और संरक्षण सुनिश्चित करते हैं, तो न केवल वर्तमान पीढ़ी की जरूरतें पूरी होंगी, बल्कि भविष्य की पीढ़ियों के लिए भी प्राकृतिक संपदा सुरक्षित रहेगी। यह सिर्फ पर्यावरण संरक्षण नहीं, बल्कि सतत् विकास की अनिवार्य नींव है।

SubQuestion No : 16

Q.16 प्राकृतिक संसाधनों की कमी का मुख्य कारण क्या है?

- Ans**
- 1. ऊर्जा-संचयन
 - 2. वृक्षारोपण
 - 3. अनियंत्रित खनन और वनों की कटाई
 - 4. वर्षा जल संचयन

Question ID : 4410091545601
Option 1 ID : 4410096105417
Option 2 ID : 4410096105415
Option 3 ID : 4410096105418
Option 4 ID : 4410096105416

Comprehension:

दिए गए गद्यांश को पढ़कर नीचे लिखे प्रश्नों के उत्तर दीजिए।

प्राकृतिक संसाधन मानव समाज के अस्तित्व और आर्थिक विकास के लिए अनिवार्य हैं। जल, मिट्टी, खनिज, वन और ऊर्जा जैसे संसाधन सीमित हैं, फिर भी आधुनिक जीवनशैली और बढ़ती जनसंख्या ने इन पर अत्यधिक दबाव डाल दिया है। अनियंत्रित खनन, वनों की कटाई, जल प्रदूषण और जीवाश्म ईंधन पर अत्यधिक निर्भरता न केवल संसाधनों की कमी बल्कि पारिस्थितिक तंत्र में असंतुलन का कारण बन रही है। संसाधनों के संरक्षण के लिए वैज्ञानिक और प्रबंधकीय दृष्टिकोण आवश्यक है। जल संरक्षण के लिए वर्षा जल संचयन, जल पुनर्चक्रण की तकनीक अपनाई जानी चाहिए। भूमि की उर्वरता बनाए रखने के लिए सतत कृषि पद्धतियों और जैविक उर्वरकों का प्रयोग जरूरी है। ऊर्जा क्षेत्र में अक्षय स्रोतों—सौर, पवन और जलविद्युत—को प्राथमिकता देनी चाहिए। इसके अतिरिक्त, नीति निर्माण, कानूनी संरचना और जन जागरूकता भी संरक्षण की दिशा में निर्णायक भूमिका निभाती हैं। यदि हम संसाधनों का विवेकपूर्ण उपयोग और संरक्षण सुनिश्चित करते हैं, तो न केवल वर्तमान पीढ़ी की जरूरतें पूरी होंगी, बल्कि भविष्य की पीढ़ियों के लिए भी प्राकृतिक संपदा सुरक्षित रहेगी। यह सिर्फ पर्यावरण संरक्षण नहीं, बल्कि सतत् विकास की अनिवार्य नींव है।

SubQuestion No : 17

Q.17 गद्यांश के अनुसार ऊर्जा संरक्षण का अक्षय-ऊर्जा स्रोत नहीं है -

- Ans**
- 1. परमाणु ऊर्जा
 - 2. सौर ऊर्जा
 - 3. जलविद्युत ऊर्जा
 - 4. पवन ऊर्जा

Question ID : 4410091545602
Option 1 ID : 4410096105421
Option 2 ID : 4410096105419
Option 3 ID : 4410096105422
Option 4 ID : 4410096105420

Comprehension:

दिए गए गद्यांश को पढ़कर नीचे लिखे प्रश्नों के उत्तर दीजिए।

प्राकृतिक संसाधन मानव समाज के अस्तित्व और आर्थिक विकास के लिए अनिवार्य हैं। जल, मिट्टी, खनिज, वन और ऊर्जा जैसे संसाधन सीमित हैं, फिर भी आधुनिक जीवनशैली और बढ़ती जनसंख्या ने इन पर अत्यधिक दबाव डाल दिया है। अनियंत्रित खनन, वनों की कटाई, जल प्रदूषण और जीवाश्म ईंधन पर अत्यधिक निर्भरता न केवल संसाधनों की कमी बल्कि पारिस्थितिक तंत्र में असंतुलन का कारण बन रही है। संसाधनों के संरक्षण के लिए वैज्ञानिक और प्रबंधकीय दृष्टिकोण आवश्यक है। जल संरक्षण के लिए वर्षा जल संचयन, जल पुनर्चक्रण की तकनीक अपनाई जानी चाहिए। भूमि की उर्वरता बनाए रखने के लिए सतत कृषि पद्धतियों और जैविक उर्वरकों का प्रयोग जरूरी है। ऊर्जा क्षेत्र में अक्षय स्रोतों—सौर, पवन और जलविद्युत—को प्राथमिकता देनी चाहिए। इसके अतिरिक्त, नीति निर्माण, कानूनी संरचना और जन जागरूकता भी संरक्षण की दिशा में निर्णायक भूमिका निभाती हैं। यदि हम संसाधनों का विवेकपूर्ण उपयोग और संरक्षण सुनिश्चित करते हैं, तो न केवल वर्तमान पीढ़ी की जरूरतें पूरी होंगी, बल्कि भविष्य की पीढ़ियों के लिए भी प्राकृतिक संपदा सुरक्षित रहेगी। यह सिर्फ पर्यावरण संरक्षण नहीं, बल्कि सतत विकास की अनिवार्य नींव है।

SubQuestion No : 18

Q.18 प्राकृतिक संसाधनों के सतत प्रबंधन की दिशा में निर्णायक भूमिका कौन निभाता है?

- Ans** 1. नीति निर्माण, कानूनी संरचना और जन जागरूकता
 2. अंतर्राष्ट्रीय निर्यात
 3. औद्योगीकरण
 4. तकनीकी यंत्र

Question ID : 4410091545603
 Option 1 ID : 4410096105424
 Option 2 ID : 4410096105426
 Option 3 ID : 4410096105425
 Option 4 ID : 4410096105423

Comprehension:

दिए गए गद्यांश को पढ़कर नीचे लिखे प्रश्नों के उत्तर दीजिए।

प्राकृतिक संसाधन मानव समाज के अस्तित्व और आर्थिक विकास के लिए अनिवार्य हैं। जल, मिट्टी, खनिज, वन और ऊर्जा जैसे संसाधन सीमित हैं, फिर भी आधुनिक जीवनशैली और बढ़ती जनसंख्या ने इन पर अत्यधिक दबाव डाल दिया है। अनियंत्रित खनन, वनों की कटाई, जल प्रदूषण और जीवाश्म ईंधन पर अत्यधिक निर्भरता न केवल संसाधनों की कमी बल्कि पारिस्थितिक तंत्र में असंतुलन का कारण बन रही है। संसाधनों के संरक्षण के लिए वैज्ञानिक और प्रबंधकीय दृष्टिकोण आवश्यक है। जल संरक्षण के लिए वर्षा जल संचयन, जल पुनर्चक्रण की तकनीक अपनाई जानी चाहिए। भूमि की उर्वरता बनाए रखने के लिए सतत कृषि पद्धतियों और जैविक उर्वरकों का प्रयोग जरूरी है। ऊर्जा क्षेत्र में अक्षय स्रोतों—सौर, पवन और जलविद्युत—को प्राथमिकता देनी चाहिए। इसके अतिरिक्त, नीति निर्माण, कानूनी संरचना और जन जागरूकता भी संरक्षण की दिशा में निर्णायक भूमिका निभाती हैं। यदि हम संसाधनों का विवेकपूर्ण उपयोग और संरक्षण सुनिश्चित करते हैं, तो न केवल वर्तमान पीढ़ी की जरूरतें पूरी होंगी, बल्कि भविष्य की पीढ़ियों के लिए भी प्राकृतिक संपदा सुरक्षित रहेगी। यह सिर्फ पर्यावरण संरक्षण नहीं, बल्कि सतत विकास की अनिवार्य नींव है।

SubQuestion No : 19

Q.19 'वन' का पर्यायवाची शब्द नहीं है-

- Ans** 1. अरण्य
 2. विपिन
 3. आलय
 4. कानन

Question ID : 4410091545604
 Option 1 ID : 4410096105429
 Option 2 ID : 4410096105428
 Option 3 ID : 4410096105427
 Option 4 ID : 4410096105430

Comprehension:

दिए गए गद्यांश को पढ़कर नीचे लिखे प्रश्नों के उत्तर दीजिए।

प्राकृतिक संसाधन मानव समाज के अस्तित्व और आर्थिक विकास के लिए अनिवार्य हैं। जल, मिट्टी, खनिज, वन और ऊर्जा जैसे संसाधन सीमित हैं, फिर भी आधुनिक जीवनशैली और बढ़ती जनसंख्या ने इन पर अत्यधिक दबाव डाल दिया है। अनियंत्रित खनन, वनों की कटाई, जल प्रदूषण और जीवाश्म ईंधन पर अत्यधिक निर्भरता न केवल संसाधनों की कमी बल्कि पारिस्थितिक तंत्र में असंतुलन का कारण बन रही है। संसाधनों के संरक्षण के लिए वैज्ञानिक और प्रबंधकीय दृष्टिकोण आवश्यक है। जल संरक्षण के लिए वर्षा जल संचयन, जल पुनर्चक्रण की तकनीक अपनाई जानी चाहिए। भूमि की उर्वरता बनाए रखने के लिए सतत कृषि पद्धतियों और जैविक उर्वरकों का प्रयोग जरूरी है। ऊर्जा क्षेत्र में अक्षय स्रोतों—सौर, पवन और जलविद्युत—को प्राथमिकता देनी चाहिए। इसके अतिरिक्त, नीति निर्माण, कानूनी संरचना और जन जागरूकता भी संरक्षण की दिशा में निर्णायक भूमिका निभाती हैं। यदि हम संसाधनों का विवेकपूर्ण उपयोग और संरक्षण सुनिश्चित करते हैं, तो न केवल वर्तमान पीढ़ी की जरूरतें पूरी होंगी, बल्कि भविष्य की पीढ़ियों के लिए भी प्राकृतिक संपदा सुरक्षित रहेगी। यह सिर्फ पर्यावरण संरक्षण नहीं, बल्कि सतत विकास की अनिवार्य नींव है।

SubQuestion No : 20

Q.20 'नींव' का अनेकार्थी शब्द है-

- Ans** 1. जड़
 2. इड़ा
 3. अवली
 4. अवतंस

Question ID : 4410091545605
 Option 1 ID : 4410096105433
 Option 2 ID : 4410096105431
 Option 3 ID : 4410096105432
 Option 4 ID : 4410096105434

Section : Discipline1

Q.1 A group of teachers wants to provide paid tuition to their own students after school hours. How does the RTE Act regulate this practice within the framework of UEE?

- Ans** 1. Allows teachers to charge fees for extra classes from parents
 2. Permits tuition only for students from disadvantaged backgrounds
 3. Requires school management approval for tuition
 4. Prohibits teachers from offering private tuition to their own students

Question ID : 4410091613171
 Option 1 ID : 4410096371518
 Option 2 ID : 4410096371521
 Option 3 ID : 4410096371519
 Option 4 ID : 4410096371520

Q.2 According to Dr. B.R. Ambedkar, higher education should help India overcome which barrier to true democracy?

- Ans
- 1. Weak implementation of principles
 - 2. Policy differences between states
 - 3. Regional language divisions
 - 4. Socio-economic inequality

Question ID : 4410091557146
Option 1 ID : 4410096151148
Option 2 ID : 4410096151147
Option 3 ID : 4410096151145
Option 4 ID : 4410096151146

Q.3 Which of the following is a significant implication of RTE-2009 for achieving UEE in India?

- Ans
- 1. It requires all schools to maintain specified pupil-teacher ratios
 - 2. It allows schools to select students based on entrance tests
 - 3. It mandates only urban schools to provide midday meals
 - 4. It restricts education only to government-run schools

Question ID : 4410091607989
Option 1 ID : 4410096350896
Option 2 ID : 4410096350898
Option 3 ID : 4410096350897
Option 4 ID : 4410096350899

Q.4 What gender need does water/sanitation policy address?

- Ans
- 1. Political gender need
 - 2. Practical gender need
 - 3. Economic gender need
 - 4. Strategic gender need

Question ID : 4410091556625
Option 1 ID : 4410096149075
Option 2 ID : 4410096149076
Option 3 ID : 4410096149077
Option 4 ID : 4410096149074

Q.5 Which factor most directly influences a learner's language of instruction in school?

- Ans
- 1. Mobility
 - 2. Region
 - 3. Social class
 - 4. Poverty

Question ID : 4410091690257
Option 1 ID : 4410096667308
Option 2 ID : 4410096667309
Option 3 ID : 4410096667306
Option 4 ID : 4410096667307

Q.6 According to the modern concept, what does curriculum include besides academic subjects?

- Ans**
- 1. Experiences
 - 2. Textbooks
 - 3. Lectures
 - 4. Only exams

Question ID : 4410091679681
Option 1 ID : 4410096626903
Option 2 ID : 4410096626902
Option 3 ID : 4410096626904
Option 4 ID : 4410096626905

Q.7 Which activity mainly demonstrates the use of fine motor skills in a child?

- Ans**
- 1. Running
 - 2. Climbing stairs
 - 3. Tying shoelaces
 - 4. Skipping

Question ID : 4410091622521
Option 1 ID : 4410096408861
Option 2 ID : 4410096408862
Option 3 ID : 4410096408860
Option 4 ID : 4410096408863

Q.8 What is the name of the stage in Piaget's theory of moral development where children perceive rules as absolute, unchanging, and externally imposed by authority figures?

- Ans**
- 1. Post-conventional
 - 2. Social contract
 - 3. Heteronomous morality
 - 4. Autonomous morality

Question ID : 4410091549471
Option 1 ID : 4410096120619
Option 2 ID : 4410096120620
Option 3 ID : 4410096120618
Option 4 ID : 4410096120617

Q.9 A teacher encourages respectful dialogue to resolve conflicts. Which peace education objective is shown?

- Ans 1. Developing conflict and resolution skills
2. Promoting aggression
3. Supporting competitive dominance
4. Encouraging silent obedience

Question ID : 4410091568302
Option 1 ID : 4410096194494
Option 2 ID : 4410096194492
Option 3 ID : 4410096194495
Option 4 ID : 4410096194493

Q.10 Which activity best demonstrates the use of fine motor skills in children?

- Ans 1. Buttoning a shirt
2. Kicking a soccer ball
3. Jumping over a rope
4. Climbing a ladder

Question ID : 4410091599575
Option 1 ID : 4410096318075
Option 2 ID : 4410096318077
Option 3 ID : 4410096318076
Option 4 ID : 4410096318078

Q.11 What is the main purpose of the education curriculum?

- Ans 1. To outline the learning objectives and content
2. To manage school finances, material and human resources
3. To assess student performance in schools only
4. To assign subjects to teach to classroom teachers

Question ID : 4410091607741
Option 1 ID : 4410096349924
Option 2 ID : 4410096349926
Option 3 ID : 4410096349925
Option 4 ID : 4410096349927

Q.12 What influences low-income worldly wisdom vs high-income academic stress?

- Ans 1. Social class context
2. Predominant genetic limit
3. Universal maturation timing
4. Inborn temperamental traits

Question ID : 4410091556518
Option 1 ID : 4410096148646
Option 2 ID : 4410096148647
Option 3 ID : 4410096148648
Option 4 ID : 4410096148649

Q.13 What are the two key phenomena mastered during the Sensorimotor stage according to Piaget?

- Ans
- 1. Egocentrism and conservation
 - 2. Abstract reasoning and logic
 - 3. Symbolic thought and language
 - 4. Causality and object permanence

Question ID : 4410091611155
Option 1 ID : 4410096363475
Option 2 ID : 4410096363478
Option 3 ID : 4410096363477
Option 4 ID : 4410096363476

Q.14 What does Article 21A of the Constitution of India state as per the Eighty-sixth Amendment Act, 2002?

- Ans
- 1. The State shall provide early childhood care and education to children below the age of six years.
 - 2. The State shall ensure food security for all citizens.
 - 3. The State shall provide equal opportunities in employment.
 - 4. The State shall provide free and compulsory education to all children of the age of six to fourteen years.

Question ID : 4410091651141
Option 1 ID : 4410096520675
Option 2 ID : 4410096520677
Option 3 ID : 4410096520676
Option 4 ID : 4410096520674

Q.15 Which Constitutional Article grants the fundamental right to free and compulsory education for children aged 6–14 years?

- Ans
- 1. Article 45
 - 2. Article 21A
 - 3. Article 14
 - 4. Article 46

Question ID : 4410091556718
Option 1 ID : 4410096149446
Option 2 ID : 4410096149447
Option 3 ID : 4410096149449
Option 4 ID : 4410096149448

Q.16 Which of the following is an example of moral emotions?

- Ans
- 1. Joy, laughter, humour, games
 - 2. Anger, hunger, thirst, sleep
 - 3. Guilt, empathy, shame, pride
 - 4. Strength, energy, speed, power

Question ID : 4410091570543
Option 1 ID : 4410096203145
Option 2 ID : 4410096203146
Option 3 ID : 4410096203147
Option 4 ID : 4410096203144

Q.17 If a child faces frequent criticism at home, what personality trait is most likely to develop?

- Ans
- 1. High self-confidence
 - 2. Independence
 - 3. Assertiveness
 - 4. Low self-esteem

Question ID : 4410091685760
Option 1 ID : 4410096649935
Option 2 ID : 4410096649937
Option 3 ID : 4410096649936
Option 4 ID : 4410096649934

Q.18 Which factor is most likely to promote positive personality development in a child?

- Ans
- 1. Lack of peer interaction
 - 2. Exposure to discrimination
 - 3. Irregular school attendance
 - 4. Supportive family environment

Question ID : 4410091640176
Option 1 ID : 4410096477900
Option 2 ID : 4410096477901
Option 3 ID : 4410096477899
Option 4 ID : 4410096477898

Q.19 Social mobility refers to:

- Ans
- 1. Seasonal changes in employment
 - 2. Migration from rural to urban areas only
 - 3. Movement across social strata
 - 4. Distribution of natural resources

Question ID : 4410091572447
Option 1 ID : 4410096210726
Option 2 ID : 4410096210725
Option 3 ID : 4410096210724
Option 4 ID : 4410096210727

Q.20 Who was the chairman of the University Education Commission formed in 1948-49 in India?

- Ans**
- 1. Dr. Zakir Hussain
 - 2. Dr. S. Radhakrishnan
 - 3. Dr. S. P. Mukherjee
 - 4. Dr. Homi Bhabha

Question ID : 4410091647856
 Option 1 ID : 4410096507690
 Option 2 ID : 4410096507689
 Option 3 ID : 4410096507691
 Option 4 ID : 4410096507692

Section : Discipline2

Q.1 What does the teacher's use of picture books, songs, and storytelling in a first-grade classroom primarily illustrate?

- Ans**
- 1. Solely focusing on grammar drills
 - 2. Ignoring comprehension and conversation
 - 3. Rote memorization of vocabulary lists only
 - 4. Learning through integrated experiences

Question ID : 4410091547684
 Option 1 ID : 4410096113582
 Option 2 ID : 4410096113581
 Option 3 ID : 4410096113580
 Option 4 ID : 4410096113579

Q.2 संवादात्मक भाषा शिक्षण (CLT) के उदय से पूर्व, ऑडियोलिंगुअल (audiolingual) पद्धति ने भाषा शिक्षण में क्या दृष्टिकोण अपनाया?

- Ans**
- 1. पाठों में प्रौद्योगिकी को एकीकृत करना
 - 2. वास्तविक जीवन से संबंधित वार्तालाप (conversations) को प्रोत्साहित करना
 - 3. आदत निर्माण के माध्यम से मॉर्फोसिंटैक्टिक पैटर्न (morphosyntactic patterns) पर फोकस करना
 - 4. परियोजना-आधारित अधिगम को बढ़ावा देना

Question ID : 4410091612043
 Option 1 ID : 4410096366998
 Option 2 ID : 4410096366995
 Option 3 ID : 4410096366996
 Option 4 ID : 4410096366997

Q.3 In working groups, which pattern reflects unequal interaction leading to potential subgroup creation among members?

- Ans 1. Unequal valence in interactions
 2. Even sharing of all ideas daily
 3. Total equality in every talk
 4. No bonds or attractions formed

Question ID : 4410091553550
Option 1 ID : 4410096136872
Option 2 ID : 4410096136871
Option 3 ID : 4410096136873
Option 4 ID : 4410096136874

Q.4 In which 5-E phase do students link their observations to scientific terms and formal definitions?

- Ans 1. Explanation phase concept definition.
 2. Evaluation stage procedures.
 3. Elaboration phase application.
 4. Engagement phase motivation.

Question ID : 4410091557339
Option 1 ID : 4410096151793
Option 2 ID : 4410096151791
Option 3 ID : 4410096151794
Option 4 ID : 4410096151792

Q.5 When a teacher relates new content to students' existing knowledge, which teaching maxim is being applied?

- Ans 1. From known to unknown
 2. From easy to difficult
 3. From abstract to concrete
 4. From whole to part

Question ID : 4410091692667
Option 1 ID : 4410096676723
Option 2 ID : 4410096676725
Option 3 ID : 4410096676726
Option 4 ID : 4410096676724

Q.6 Which function of language enables the transmission of ideas, knowledge, and cultural heritage from one generation to the next?

- Ans
- 1. Expressive
 - 2. Industrial
 - 3. Directive
 - 4. Preservative

Question ID : 4410091682192
Option 1 ID : 4410096636115
Option 2 ID : 4410096636117
Option 3 ID : 4410096636114
Option 4 ID : 4410096636116

Q.7 Which racial group, according to Dr. B.S. Guha, is considered dominant among Indian tribal communities?

- Ans
- 1. Nordic racial stock
 - 2. Armenoid racial stock
 - 3. Proto-Australoid stock
 - 4. Oriental racial stock

Question ID : 4410091570641
Option 1 ID : 4410096203548
Option 2 ID : 4410096203550
Option 3 ID : 4410096203547
Option 4 ID : 4410096203549

Q.8 Prejudice toward an out-group is cognitively sustained by intensifying the perception of what pattern?

- Ans
- 1. Inter-group resource competition
 - 2. Subjective phenomenological reaction
 - 3. Intra-group behavioral similarities
 - 4. External societal constraints

Question ID : 4410091557277
Option 1 ID : 4410096151637
Option 2 ID : 4410096151639
Option 3 ID : 4410096151638
Option 4 ID : 4410096151640

Q.9 How can learning to observe help in improving self-understanding when facing a new challenge?

- Ans
- 1. By recognizing thoughts, emotions, and responses
 - 2. By depending only on external instructions
 - 3. By ignoring personal reactions and feelings
 - 4. By avoiding reflection during difficult tasks

Question ID : 4410091632864
Option 1 ID : 4410096449575
Option 2 ID : 4410096449577
Option 3 ID : 4410096449576
Option 4 ID : 4410096449574

Q.10 A five-year-old is able to segment words into syllables, identify rhyming words during play, and begins to read simple logos and signs. Which instructional strategy would best support further development of both phonological awareness and emergent literacy skills in this child?

- Ans
- 1. Using only verbal instructions without visual or print-based materials.
 - 2. Focusing solely on rote memorization of word lists and alphabet tracing.
 - 3. Engaging in shared reading with rhymes and discussions about print directionality.
 - 4. Introducing complex narrative writing tasks and independent reading assignments.

Question ID : 4410091613340
Option 1 ID : 4410096372197
Option 2 ID : 4410096372195
Option 3 ID : 4410096372194
Option 4 ID : 4410096372196

Q.11 Which of the following is a commonly used method for teaching mathematics at the primary level?

- Ans
- 1. Ignoring problem-solving and emphasizing textbook reading exclusively
 - 2. Teaching advanced topics without linking them to students' prior knowledge
 - 3. Using concrete materials, visual aids, and activity-based learning to explain concepts
 - 4. Focusing only on rote memorization of numbers and formulas without practice

Question ID : 4410091542520
Option 1 ID : 4410096093164
Option 2 ID : 4410096093163
Option 3 ID : 4410096093166
Option 4 ID : 4410096093165

Q.12 उस कथन का चयन कीजिए जो सर्वोत्तम रूप से यह स्पष्ट करता है कि एक प्रतिष्ठित सांस्कृतिक व्यक्ति वर्तमान में भी शिक्षार्थियों के लिए प्रासंगिक क्यों बना हुआ है?

- Ans
- 1. उनका कार्य पिछली पीढ़ियों तक सीमित मुद्दों को संबोधित करना है।
 - 2. उनकी कहानियां केवल पारंपरिक सांस्कृतिक कार्यक्रमों से संबंधित हैं।
 - 3. उनके विचार वर्तमान सामाजिक संदर्भों पर अनुचितन का समर्थन करते हैं।
 - 4. उनका प्रभाव मुख्यतः अप्रचलित नैतिक शिक्षाओं पर होता है।

Question ID : 4410091542411
Option 1 ID : 4410096092750
Option 2 ID : 4410096092748
Option 3 ID : 4410096092747
Option 4 ID : 4410096092749

Q.13 Which concept highlights the interplay of languages within a single speaker's communicative abilities?

- Ans
- 1. Monolingualism
 - 2. Code-shifting
 - 3. Language attrition
 - 4. Plurilingualism

Question ID : 4410091554838
Option 1 ID : 4410096141979
Option 2 ID : 4410096141981
Option 3 ID : 4410096141982
Option 4 ID : 4410096141980

Q.14 Who became well known in the 1960s and 70s for research in observational learning?

- Ans
- 1. Jean Piaget and his team
 - 2. B.F. Skinner and his associates
 - 3. Albert Bandura and his colleagues
 - 4. Sigmund Freud and his students

Question ID : 4410091681613
Option 1 ID : 4410096633832
Option 2 ID : 4410096633833
Option 3 ID : 4410096633830
Option 4 ID : 4410096633831

Q.15 Which of the following is NOT typically included in a lesson plan?

- Ans
- 1. Method or procedure
 - 2. Assessment measures
 - 3. Student academic record
 - 4. Learning objectives

Question ID : 4410091681848
Option 1 ID : 4410096634763
Option 2 ID : 4410096634764
Option 3 ID : 4410096634765
Option 4 ID : 4410096634762

Q.16 What role does language play when students work together on group projects in class?

- Ans
- 1. It makes them compete with each other.
 - 2. It encourages silent work.
 - 3. It helps them compare grades.
 - 4. It enables them to share ideas and collaborate.

Question ID : 4410091608401
Option 1 ID : 4410096352517
Option 2 ID : 4410096352518
Option 3 ID : 4410096352519
Option 4 ID : 4410096352516

Q.17 Which step in lesson planning involves selecting appropriate teaching methods and materials?

- Ans
- 1. Choosing instructional strategies and resources for effective lesson delivery
 - 2. Organizing classroom seating arrangements for optimal student interaction
 - 3. Writing clear learning objectives to define desired student outcomes
 - 4. Assessing student performance through tests and evaluation measures

Question ID : 4410091637453
Option 1 ID : 4410096467374
Option 2 ID : 4410096467377
Option 3 ID : 4410096467375
Option 4 ID : 4410096467376

Q.18 A teacher begins a lesson by linking new content to what students already know. Which maxim is applied?

- Ans
- 1. Maxim of interest
 - 2. Maxim of complex to simple
 - 3. Maxim of known to unknown
 - 4. Maxim of difficulty

Question ID : 4410091568329
Option 1 ID : 4410096194601
Option 2 ID : 4410096194603
Option 3 ID : 4410096194602
Option 4 ID : 4410096194600

Q.19 Which of the following is a simple approach to introducing mindfulness in the classroom?

- Ans
- 1. Asking students to solve problems faster than usual
 - 2. Guiding students to focus on their breathing for a short period
 - 3. Encouraging students to memorise long passages silently
 - 4. Instructing students to avoid reflecting on their feelings

Question ID : 4410091542408
Option 1 ID : 4410096092735
Option 2 ID : 4410096092736
Option 3 ID : 4410096092737
Option 4 ID : 4410096092738

Q.20 In planning curriculum reform, a team considers an approach where all curriculum, instruction, and evaluation components are viewed as interconnected, so changes in one area affect the others. Which curriculum approach does this planning reflect?

- Ans
- 1. Systems approach, as it treats all components as interdependent for achieving goals
 - 2. Behavioural approach, as it is centered on pre-specified goals and outcomes
 - 3. Humanistic approach, as it prioritizes student interests and project activities
 - 4. Managerial approach, as it emphasizes administrative supervision and resource allocation

Question ID : 4410091613192
Option 1 ID : 4410096371603
Option 2 ID : 4410096371604
Option 3 ID : 4410096371605
Option 4 ID : 4410096371602

Section : Discipline3

Q.1 A principal at a rural school wishes to enhance student learning outcomes by leveraging community partnerships. Drawing on examples from the TAME project and Indian CBSE schools, which approach should the principal prioritize to foster trust and shared ownership among stakeholders?

- Ans
- 1. Conducting student surveys without engaging parents or teachers
 - 2. Assigning all decision-making to school management without external input
 - 3. Inviting NGOs solely for infrastructure support without parent involvement
 - 4. Facilitating regular PTA meetings focused on school improvement planning

Question ID : 4410091608749
Option 1 ID : 4410096353919
Option 2 ID : 4410096353917
Option 3 ID : 4410096353918
Option 4 ID : 4410096353916

Q.2 Which of the following best describes a characteristic of an effective educator?

- Ans
- 1. Supports school-wide discipline policies
 - 2. Demonstrates clear communication skills
 - 3. Participates in community activities often
 - 4. Follows established classroom routines

Question ID : 4410091636901
 Option 1 ID : 4410096465448
 Option 2 ID : 4410096465445
 Option 3 ID : 4410096465446
 Option 4 ID : 4410096465447

Q.3 What is one primary advantage of the topics approach to teaching mathematics?

- Ans
- 1. Focuses on problem-solving contexts
 - 2. Promotes higher order thinking skills
 - 3. Ensures coverage of the full curriculum
 - 4. Maps student knowledge within a domain

Question ID : 4410091655130
 Option 1 ID : 4410096535487
 Option 2 ID : 4410096535486
 Option 3 ID : 4410096535485
 Option 4 ID : 4410096535488

Q.4 How has the structure of families in India contributed to children's television watching habits?

- Ans
- 1. Joint families encourage children to watch less TV.
 - 2. Children with many siblings watch more TV.
 - 3. Nuclear families with working parents lead children to watch more TV.
 - 4. Families with stay-at-home parents increase children's TV time.

Question ID : 4410091608067
 Option 1 ID : 4410096351205
 Option 2 ID : 4410096351206
 Option 3 ID : 4410096351204
 Option 4 ID : 4410096351207

Q.5 A word that is spelt and pronounced like another word but has a different meaning is called _____

- Ans
- 1. Antonyms
 - 2. Idioms
 - 3. Homonyms
 - 4. Synonyms

Question ID : 4410091546910
 Option 1 ID : 4410096110511
 Option 2 ID : 4410096110509
 Option 3 ID : 4410096110508
 Option 4 ID : 4410096110510

Q.6 The most effective way to reduce negative advertising impact on children is to:

- Ans
- 1. Increase children's viewing time
 - 2. Ban all advertisements in Television
 - 3. Rely solely on parental control
 - 4. Promote media literacy education

Question ID : 4410091580985
Option 1 ID : 4410096245292
Option 2 ID : 4410096245291
Option 3 ID : 4410096245290
Option 4 ID : 4410096245289

Q.7 Which of the following is an example of correct subject-verb agreement?

- Ans
- 1. Neither the teachers nor the principal is available today.
 - 2. Neither the teachers nor the principal are available today.
 - 3. Neither the teachers nor the principal were available today.
 - 4. Neither the teachers nor the principal was available today.

Question ID : 4410091633802
Option 1 ID : 4410096453298
Option 2 ID : 4410096453299
Option 3 ID : 4410096453301
Option 4 ID : 4410096453300

Q.8 How do educational administrators support staff in maintaining high teaching standards?

- Ans
- 1. By increasing student enrollment in the school
 - 2. By managing cafeteria menus and food services
 - 3. By organizing sports tournaments and extracurricular events
 - 4. By coordinating training sessions and workshops

Question ID : 4410091602351
Option 1 ID : 4410096328978
Option 2 ID : 4410096328980
Option 3 ID : 4410096328981
Option 4 ID : 4410096328979

Q.9 Which of the following best describes a teacher's primary role in a contemporary classroom?

- Ans
- 1. Managing routine administrative classroom tasks
 - 2. Facilitating student learning and development
 - 3. Delivering structured lectures to students
 - 4. Enforcing classroom discipline at all times

Question ID : 4410091686849
Option 1 ID : 4410096654221
Option 2 ID : 4410096654220
Option 3 ID : 4410096654218
Option 4 ID : 4410096654219

Q.10 A teacher observes that children in her class tend to move from simply banging blocks together to using them to build towers, then later engaging in pretend play with those towers as castles. Which developmental trend is best illustrated by this sequence?

- Ans
- 1. Progression from Symbolic to Constructive to Sensorimotor Play
 - 2. Direct transition from Constructive to Games with Rules
 - 3. Immediate leap from Sensorimotor to Games with Rules
 - 4. Progression from Sensorimotor to Constructive to Symbolic Play

Question ID : 4410091679098

Option 1 ID : 4410096624598

Option 2 ID : 4410096624600

Option 3 ID : 4410096624599

Option 4 ID : 4410096624597

Q.11 Which of the following options best explains why English is considered a global language in the context of international communication and education?

- Ans
- 1. It is the official language in every country.
 - 2. It is a common medium for global interaction.
 - 3. It is the only language used in international literature.
 - 4. It is the oldest language spoken worldwide.

Question ID : 4410091609774

Option 1 ID : 4410096358011

Option 2 ID : 4410096358009

Option 3 ID : 4410096358010

Option 4 ID : 4410096358008

Q.12 Which factor most critically shapes teacher identity in the context of school culture?

- Ans
- 1. Government policy mandates
 - 2. Student assessment results
 - 3. Shared values and beliefs in school culture
 - 4. Personal academic achievement

Question ID : 4410091611036

Option 1 ID : 4410096363006

Option 2 ID : 4410096363004

Option 3 ID : 4410096363005

Option 4 ID : 4410096363003

Q.13 Which of the following is an example of the defense mechanism called 'denial'?

- Ans
- 1. Reverting to earlier developmental stages
 - 2. Attributing one's own feelings to others
 - 3. Redirecting emotions to a safer target
 - 4. Refusing to accept a painful reality

Question ID : 4410091609401
Option 1 ID : 4410096356527
Option 2 ID : 4410096356526
Option 3 ID : 4410096356525
Option 4 ID : 4410096356524

Q.14 Which sentence shows a focus on correctness rather than appropriateness?

- Ans
- 1. It me.
 - 2. Me is it.
 - 3. It is I.
 - 4. It's me.

Question ID : 4410091639684
Option 1 ID : 4410096476096
Option 2 ID : 4410096476095
Option 3 ID : 4410096476093
Option 4 ID : 4410096476094

Q.15 How can a teacher make Class four learners measure the length of an object?

- Ans
- 1. Using standard units like centimetres.
 - 2. Using a stopwatch.
 - 3. Using non-standard units like a pencil.
 - 4. Estimating visually.

Question ID : 4410091655085
Option 1 ID : 4410096535305
Option 2 ID : 4410096535308
Option 3 ID : 4410096535306
Option 4 ID : 4410096535307

Q.16 According to the National Education Policy (NEP) 2020, which action most strongly demonstrates a teacher's role as a facilitator of competency-based learning?

- Ans
- 1. Finishing the textbook strictly chapter by chapter
 - 2. Maximizing lecture time to cover more content
 - 3. Using weekly high-stakes tests to rank students
 - 4. Designing performance tasks aligned to learning outcomes and rubrics

Question ID : 4410091563629
Option 1 ID : 4410096176087
Option 2 ID : 4410096176085
Option 3 ID : 4410096176086
Option 4 ID : 4410096176088

Q.17 Which of the following is an essential characteristic of an effective educator?

- Ans**
- 1. Empathy and good communication skills
 - 2. Prioritizing punishments over motivation
 - 3. Rigid thinking and discouraging questions
 - 4. Teaching without adapting to student needs

Question ID : 4410091548345
Option 1 ID : 4410096116090
Option 2 ID : 4410096116092
Option 3 ID : 4410096116089
Option 4 ID : 4410096116091

Q.18 Which of the following is not an objective of teaching mathematics?

- Ans**
- 1. To understand links within math and across subjects
 - 2. To improve reading skills
 - 3. To develop speed, accuracy and precision in calculations
 - 4. To use mathematical concepts in everyday life

Question ID : 4410091546868
Option 1 ID : 4410096110341
Option 2 ID : 4410096110343
Option 3 ID : 4410096110340
Option 4 ID : 4410096110342

Q.19 A primary school teacher aims to condition positive attitudes toward homework by pairing the receipt of completed assignments (Neutral Stimulus) with a group song and applause (Positive Unconditioned Stimulus). This pedagogical approach relies on which fundamental behaviorist principle?

- Ans**
- 1. Response complexity reduction.
 - 2. Stimulus substitution process.
 - 3. Reinforcement consistency importance.
 - 4. Intrinsic motivation enhancement.

Question ID : 4410091550647
Option 1 ID : 4410096124989
Option 2 ID : 4410096124988
Option 3 ID : 4410096124987
Option 4 ID : 4410096124990

Q.20 निम्नलिखित में से कौन-सा बच्चों के खेल का एक प्रमुख अभिलक्षण है?

- Ans
- 1. बच्चे इसलिए खेलते हैं क्योंकि उन्हें मजबूर किया जाता है।
 - 2. बच्चे तभी खेलते हैं जब वयस्क उन्हें खेलने के लिए कहते हैं।
 - 3. बच्चे अपनी प्रतिभा का दिखावा करने के लिए खेलते हैं।
 - 4. बच्चे इसलिए खेलते हैं क्योंकि उन्हें आनंद प्राप्त होता है।

Question ID : 4410091682628

Option 1 ID : 4410096637767

Option 2 ID : 4410096637769

Option 3 ID : 4410096637766

Option 4 ID : 4410096637768

Section : Discipline4

Q.1 How does deforestation primarily impact the environment?

- Ans
- 1. By causing environmental imbalance and loss of biodiversity
 - 2. By reducing urban population
 - 3. By altering local climate patterns in ways that could increase rainfall
 - 4. By reducing certain types of air pollutants through the removal of vegetation

Question ID : 4410091608377

Option 1 ID : 4410096352420

Option 2 ID : 4410096352422

Option 3 ID : 4410096352421

Option 4 ID : 4410096352423

Q.2 What is one significant impact of privatization on society as related to education?

- Ans
- 1. Standardizes quality across all schools
 - 2. Removes the need for qualified teachers
 - 3. Expands schooling options but may widen inequalities
 - 4. Guarantees equal access for all learners

Question ID : 4410091687722

Option 1 ID : 4410096657677

Option 2 ID : 4410096657676

Option 3 ID : 4410096657674

Option 4 ID : 4410096657675

Q.3 Which micro teaching skill focuses on the way a teacher begins a lesson to gain student attention?

- Ans**
- 1. Skill of questioning
 - 2. Skill of explanation
 - 3. Skill of set induction
 - 4. Skill of reinforcement

Question ID : 4410091627396
Option 1 ID : 4410096427871
Option 2 ID : 4410096427873
Option 3 ID : 4410096427870
Option 4 ID : 4410096427872

Q.4 When designing objectives for teaching English in the curriculum, which approach best aligns with the principles of pedagogy and the importance of English?

- Ans**
- 1. Prioritize translation exercises over speaking activities
 - 2. Set objectives only for written exams
 - 3. Emphasize rote memorization of texts
 - 4. Build communication and cultural awareness

Question ID : 4410091627360
Option 1 ID : 4410096427728
Option 2 ID : 4410096427729
Option 3 ID : 4410096427726
Option 4 ID : 4410096427727

Q.5 One of the primary objectives of teaching English at the school level is to:

- Ans**
- 1. Focusing only on mother-tongue translation
 - 2. Training learners just for competitive tests
 - 3. Making students learn grammar without use
 - 4. Building skills to express and understand ideas

Question ID : 4410091552916
Option 1 ID : 4410096133994
Option 2 ID : 4410096133995
Option 3 ID : 4410096133992
Option 4 ID : 4410096133993

Q.6 EVS textbook under 'Things We Make and Do' as the major theme integrates what cross-cutting content area?

- Ans**
- 1. Processes, Techniques, and Experiments: Integrated Across Themes.
 - 2. Shelter Mapping: Integrated with Plant Observations.
 - 3. Travel and Communication: Aligned with Food Sources.
 - 4. Relationships and Family Dynamics: Prioritizing Social Bonds.

Question ID : 4410091564036
Option 1 ID : 4410096177744
Option 2 ID : 4410096177741
Option 3 ID : 4410096177742
Option 4 ID : 4410096177743

Q.7 When outcomes arise even from fair competition, how are such outcomes ultimately classified?

- Ans**
- 1. Legitimately accepted disparities
 - 2. Institutionalized economic fairness
 - 3. Morally justifiable results
 - 4. Substantially inegalitarian results

Question ID : 4410091558873
Option 1 ID : 4410096157878
Option 2 ID : 4410096157879
Option 3 ID : 4410096157877
Option 4 ID : 4410096157880

Q.8 An analysis of enrollments reveals that elite private schools in metropolitan areas mainly cater to affluent families, while rural and low-income students struggle to gain admission. What social consequence is most evident in this situation?

- Ans**
- 1. Complete elimination of urban-rural education gaps
 - 2. Substantial increase in rural enrollment rates
 - 3. Widening of educational inequality and limited social mobility
 - 4. Balanced representation of all social groups in private schools

Question ID : 4410091633275
Option 1 ID : 4410096451217
Option 2 ID : 4410096451215
Option 3 ID : 4410096451214
Option 4 ID : 4410096451216

Q.9 Why did the Indian Parliament pass The Official Languages Act, 1963, regarding English?

- Ans**
- 1. To declare English an associate official language indefinitely
 - 2. To make English compulsory in colleges only
 - 3. To make English optional for primary students
 - 4. To remove English from schools completely

Question ID : 4410091572455
Option 1 ID : 4410096210757
Option 2 ID : 4410096210758
Option 3 ID : 4410096210759
Option 4 ID : 4410096210756

Q.10 How can teachers personalize teaching materials using textbooks?

- Ans**
- 1. By using only printed textbooks.
 - 2. By strictly following the syllabus.
 - 3. By reducing the amount of content.
 - 4. By adapting the content to suit individual learner needs.

Question ID : 4410091637011
Option 1 ID : 4410096465876
Option 2 ID : 4410096465873
Option 3 ID : 4410096465875
Option 4 ID : 4410096465874

Q.11 Which approach in teaching Environmental Studies (EVS) focuses on connecting topics from different subjects to provide a holistic understanding?

- Ans**
- 1. Integrated approach
 - 2. Conceptual process approach
 - 3. Scientific approach
 - 4. Inclusive approach

Question ID : 4410091622383
Option 1 ID : 4410096408306
Option 2 ID : 4410096408304
Option 3 ID : 4410096408305
Option 4 ID : 4410096408307

Q.12 A principal aims to achieve "creative synthesis" in inter-departmental curriculum design. Which action effectively operationalizes the pedagogical leader's relational characteristic?

- Ans
- 1. Mandate fixed unit completion deadlines.
 - 2. Schedule cross-departmental planning sessions.
 - 3. Standardize all classroom teaching materials.
 - 4. Increase faculty individual research grants.

Question ID : 4410091550843

Option 1 ID : 4410096125653

Option 2 ID : 4410096125652

Option 3 ID : 4410096125654

Option 4 ID : 4410096125651

Q.13 Which phase in micro-teaching focuses on analyzing and thoroughly discussing the teaching skill with the supervisor before demonstration?

- Ans
- 1. Transfer phase
 - 2. Skill acquisition phase
 - 3. Knowledge acquisition phase
 - 4. Demonstration phase

Question ID : 4410091659845

Option 1 ID : 4410096553495

Option 2 ID : 4410096553494

Option 3 ID : 4410096553493

Option 4 ID : 4410096553496

Q.14 Which theme is commonly addressed in the EVS curriculum at the primary level to help students understand nature and living things?

- Ans
- 1. Electric Circuits
 - 2. Plants and Animals
 - 3. Periodic Table
 - 4. Historical Revolutions

Question ID : 4410091621550

Option 1 ID : 4410096405004

Option 2 ID : 4410096405005

Option 3 ID : 4410096405003

Option 4 ID : 4410096405006

Q.15 An effective feedback system in teaching writing should primarily:

- Ans
- 1. Focus only on grammatical accuracy and spelling errors
 - 2. Emphasize both the content and the form of student writing
 - 3. Encourage rote memorization of correct sentences
 - 4. Use red lines without any written comments

Question ID : 4410091579716
Option 1 ID : 4410096240170
Option 2 ID : 4410096240171
Option 3 ID : 4410096240173
Option 4 ID : 4410096240172

Q.16 Which statement best describes the Grammar Translation Method?

- Ans
- 1. Emphasizes translation, grammar, reading, and writing
 - 2. Focuses on speaking and listening
 - 3. Encourages interactive learner-centered activities
 - 4. Uses games and storytelling

Question ID : 4410091579686
Option 1 ID : 4410096240052
Option 2 ID : 4410096240049
Option 3 ID : 4410096240050
Option 4 ID : 4410096240051

Q.17 In a classroom with students of varying reading styles, why is it important for a textbook to be compatible with different styles?

- Ans
- 1. It makes the textbook shorter
 - 2. It limits the teacher's flexibility
 - 3. It prevents any classroom discussion
 - 4. It ensures all students can learn

Question ID : 4410091604943
Option 1 ID : 4410096338938
Option 2 ID : 4410096338937
Option 3 ID : 4410096338939
Option 4 ID : 4410096338936

Q.18 Who is considered the pioneer of the trait theory of leadership?

- Ans
- 1. Maria Montessori
 - 2. Thomas Carlyle
 - 3. John Dewey
 - 4. Swami Vivekanand

Question ID : 4410091548090
Option 1 ID : 4410096115067
Option 2 ID : 4410096115065
Option 3 ID : 4410096115068
Option 4 ID : 4410096115066

Q.19 Which economic process primarily means the removal of state controls and regulations to facilitate market forces?

- Ans
- 1. Nationalization
 - 2. Market consolidation
 - 3. Decentralization
 - 4. Liberalization

Question ID : 4410091551249
Option 1 ID : 4410096127283
Option 2 ID : 4410096127286
Option 3 ID : 4410096127285
Option 4 ID : 4410096127284

Q.20 Which is NOT one of the three main functions performed by the Education Department in a State or Union Territory?

- Ans
- 1. Operational
 - 2. Directive
 - 3. Regulatory
 - 4. Instructional

Question ID : 4410091624042
Option 1 ID : 4410096414749
Option 2 ID : 4410096414750
Option 3 ID : 4410096414748
Option 4 ID : 4410096414751

Section : Discipline5

Q.1 What skill can be developed by asking children to arrange pebbles according to categories like shape, size, or colour?

- Ans
- 1. Drawing skills
 - 2. Classification skills
 - 3. Recreation skills
 - 4. Reflection skills

Question ID : 4410091624734
Option 1 ID : 4410096417468
Option 2 ID : 4410096417467
Option 3 ID : 4410096417470
Option 4 ID : 4410096417469

Q.2 Which statement best defines "equity" in education?

- Ans
- 1. Treating every student exactly the same.
 - 2. Ensuring fairness by addressing individual needs.
 - 3. All students receive the same resources.
 - 4. Providing equal access to opportunities regardless of background.

Question ID : 4410091582060
Option 1 ID : 4410096249509
Option 2 ID : 4410096249508
Option 3 ID : 4410096249507
Option 4 ID : 4410096249510

Q.3 A Class 8 teacher uses a kit tester to classify metals and non-metals. What cognitive skill are students developing through this activity?

- Ans
- 1. Copying data from the board
 - 2. Simple recollection of periodic table groups
 - 3. Classification and analytical thinking
 - 4. Passive listening to textbook explanations

Question ID : 4410091609311
Option 1 ID : 4410096356171
Option 2 ID : 4410096356169
Option 3 ID : 4410096356168
Option 4 ID : 4410096356170

Q.4 Which of the following teaching aids is a modern teaching method used as audio or audio-visual aids that exposes students to a variety of listening and speaking skills?

- Ans
- 1. Language lab
 - 2. Mobile technology
 - 3. Newspaper
 - 4. Improvisation

Question ID : 4410091548277
Option 1 ID : 4410096115822
Option 2 ID : 4410096115824
Option 3 ID : 4410096115821
Option 4 ID : 4410096115823

Q.5 Which classroom practice promotes gender equality most effectively?

- Ans
- 1. Selective questioning
 - 2. Assigning fixed gender roles
 - 3. Separate seating arrangements
 - 4. Mixed-gender group activities

Question ID : 4410091708580
Option 1 ID : 4410096738974
Option 2 ID : 4410096738972
Option 3 ID : 4410096738971
Option 4 ID : 4410096738973

Q.6 Why is teaching listening skills considered pedagogically challenging?

- Ans
- 1. It requires no instructional planning
 - 2. It develops automatically without input
 - 3. It depends only on reading proficiency
 - 4. It is internal and not directly observable

Question ID : 4410091585046
Option 1 ID : 4410096261419
Option 2 ID : 4410096261421
Option 3 ID : 4410096261422
Option 4 ID : 4410096261420

Q.7 Both science and eco-clubs commonly organize quiz, essay, painting competitions, and rallies to primarily promote:

- Ans
- 1. Teacher evaluation metrics based on event frequency rather than impact
 - 2. Entertainment diversion from core academic responsibilities without learning outcomes
 - 3. Collective environmental awareness and scientific inquiry among participants
 - 4. Individual academic ranking through isolated competitive assessments only

Question ID : 4410091564665
Option 1 ID : 4410096180238
Option 2 ID : 4410096180239
Option 3 ID : 4410096180237
Option 4 ID : 4410096180236

Q.8 Bloom's three domains framework indicates that affective objectives primarily promote non-intellectual development. What specific area of growth does this encompass?

- Ans
- 1. Internalized value systems guiding consistent behaviors
 - 2. Analytical breakdown of complex problem structures
 - 3. Memorized factual knowledge for recall accuracy
 - 4. Physical coordination through repetitive movements

Question ID : 4410091564620
Option 1 ID : 4410096180065
Option 2 ID : 4410096180068
Option 3 ID : 4410096180066
Option 4 ID : 4410096180067

Q.9 कौन-सी कक्षा रणनीति, समावेशी परिवेश में अधिगम में मंद कठिनाइयों वाले विद्यार्थियों की सर्वोत्तम रूप से सहायता करती है?

- Ans
- 1. कठिनाइयों की उपेक्षा (Ignoring difficulties)
 - 2. विभेदीकृत अनुदेशन (Differentiated instruction)
 - 3. एकसमान असाइनमेंट्स (Uniform assignments)
 - 4. सहपाठी अपवर्जन (Peer exclusion)

Question ID : 4410091633781
Option 1 ID : 4410096453217
Option 2 ID : 4410096453215
Option 3 ID : 4410096453214
Option 4 ID : 4410096453216

Q.10 When students use mathematics to calculate distances, time, and cost in daily life, how is mathematics being viewed as?

- Ans
- 1. An abstract school subject
 - 2. Tool for practical application
 - 3. Set of mechanical procedures
 - 4. Difficult theoretical discipline

Question ID : 4410091692936
Option 1 ID : 4410096677810
Option 2 ID : 4410096677811
Option 3 ID : 4410096677813
Option 4 ID : 4410096677812

Q.11 How can textbooks influence gender perceptions in classrooms?

- Ans
- 1. By including diverse cultures
 - 2. By reinforcing stereotypes
 - 3. By offering only historical facts
 - 4. By using gender-neutral language

Question ID : 4410091633783
Option 1 ID : 4410096453223
Option 2 ID : 4410096453222
Option 3 ID : 4410096453225
Option 4 ID : 4410096453224

Q.12 समावेशी शिक्षा के संदर्भ में, विशेष आवश्यकता वाले बच्चों में अधिगम कठिनाइयों की सीमा को समझना क्यों महत्वपूर्ण है?

- Ans
- 1. केवल अकादमिक उपलब्धि की प्राथमिकता सुनिश्चित करने के लिए
 - 2. विभिन्न विद्यार्थी आवश्यकताओं के अनुरूप प्रभावी सहायता रणनीतियां तैयार करने के लिए
 - 3. नियमित कक्षाओं में विशेष आवश्यकता वाले विद्यार्थियों की संख्या कम करने के लिए
 - 4. समान चुनौतियों वाले बच्चों को एक साथ समूहित करने के लिए

Question ID : 4410091618256
Option 1 ID : 4410096391894
Option 2 ID : 4410096391891
Option 3 ID : 4410096391893
Option 4 ID : 4410096391892

Q.13 Children with hearing or visual impairment may struggle in the classroom due to which type of disability?

- Ans
- 1. Emotional disorder
 - 2. Cognitive disability
 - 3. Health problem
 - 4. Sensory impairment

Question ID : 4410091704016
Option 1 ID : 4410096721144
Option 2 ID : 4410096721143
Option 3 ID : 4410096721145
Option 4 ID : 4410096721142

Q.14 Which classroom activity best promotes gender inclusivity among students?

- Ans
- 1. Separating boys and girls for group work
 - 2. Promoting equal participation by all students
 - 3. Ignoring gender-related issues in the classroom
 - 4. Assigning different tasks to boys and girls

Question ID : 4410091628021
Option 1 ID : 4410096430264
Option 2 ID : 4410096430262
Option 3 ID : 4410096430265
Option 4 ID : 4410096430263

Q.15 "Boys don't cry; girls don't fight" is typical of—

- Ans
- 1. Neutral gender norms
 - 2. Balanced family norms
 - 3. Parental cultural norms
 - 4. Masculine cultural norms

Question ID : 4410091572518
Option 1 ID : 4410096211001
Option 2 ID : 4410096211003
Option 3 ID : 4410096211000
Option 4 ID : 4410096211002

Q.16 Which statement best reflects the formalist perspective on the nature of mathematical knowledge?

- Ans
- 1. Mathematical concepts are discovered through empirical observation.
 - 2. Mathematics exists independently of human thought.
 - 3. Mathematical knowledge is subjective and varies by culture.
 - 4. Mathematical truths are based on systems of axioms and logical deduction.

Question ID : 4410091616017
Option 1 ID : 4410096383006
Option 2 ID : 4410096383007
Option 3 ID : 4410096383008
Option 4 ID : 4410096383005

Q.17 What is the one fundamental characteristic of mathematics?

- Ans
- 1. Calculation
 - 2. Logical reasoning
 - 3. Memorization
 - 4. Drawing

Question ID : 4410091636783
Option 1 ID : 4410096464985
Option 2 ID : 4410096464987
Option 3 ID : 4410096464986
Option 4 ID : 4410096464988

Q.18 What is the role of a teacher regarding the Science Kit?

- Ans
- 1. Ensure materials are used regularly and safely
 - 2. Only use the kit for decoration purposes
 - 3. Keep the kit locked in the head teacher's office
 - 4. Restrict students from accessing the materials

Question ID : 4410091572498
Option 1 ID : 4410096210920
Option 2 ID : 4410096210922
Option 3 ID : 4410096210921
Option 4 ID : 4410096210923

Q.19 Which of the following is a common activity organized by school clubs to promote scientific curiosity?

- Ans
- 1. Mathematics quiz events
 - 2. Creative art contests
 - 3. Theatre practice sessions
 - 4. Student research exhibitions

Question ID : 4410091618631
Option 1 ID : 4410096393396
Option 2 ID : 4410096393398
Option 3 ID : 4410096393397
Option 4 ID : 4410096393395

Q.20 A teacher wants to assess students' understanding of geometry using a constructivist and activity-based approach. Which classroom practice would best serve this purpose?

- Ans**
- 1. Facilitating group construction of geometric shapes using paper and prompting reasoning discussions
 - 2. Assigning a worksheet with matching terms to definitions in geometry
 - 3. Demonstrating geometric constructions while students observe and take notes
 - 4. Giving a set of true or false geometry statements for individual student response

Question ID : 4410091616950

Option 1 ID : 4410096386711

Option 2 ID : 4410096386714

Option 3 ID : 4410096386713

Option 4 ID : 4410096386712

