



GOVT. OF NCT OF DELHI
Delhi Subordinate Services Selection Board
FC-18, Institutional Area, Karkardooma, Delhi – 110092.
www.dsssb.delhigovt.nic.in

Participant ID	25 [REDACTED]
Participant Name	[REDACTED]
Test Center Name	iON Digital Zone iDZ 2 Sector 62
Test Date	19/02/2026
Test Time	5:00 PM - 7:00 PM
Subject	Assistant Teacher Primary

Section : General Intelligence and Reasoning Ability

Q.1 Based on the alphabetical order, three of the following four are alike in a certain way and thus form a group. Which is the one that does not belong to that group? (Note: The odd man out is not based on the number of consonants/vowels or their position in the letter cluster)10693

- Ans
- 1. YCB
 - 2. FKI
 - 3. HLK
 - 4. CGF

Question ID : 441009764845
Option 1 ID : 4410093013375
Option 2 ID : 4410093013373
Option 3 ID : 4410093013376
Option 4 ID : 4410093013374

Adda247

Test Prime

ALL EXAMS, ONE SUBSCRIPTION



1,00,000+
Mock Tests



**Personalised
Report Card**



**Unlimited
Re-Attempt**



600+
Exam Covered



25,000+ Previous
Year Papers

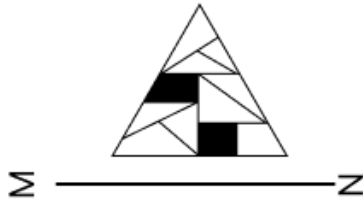


500%
Refund



ATTEMPT FREE MOCK NOW

Q.2 If the water source is placed along M-N, as shown in the figure, which of the given options will be the water reflection of the given figure?



Ans

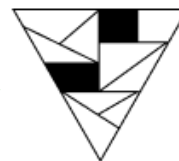
1.



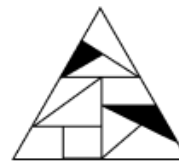
2.



3.



4.



Question ID : 441009864936
 Option 1 ID : 4410093412844
 Option 2 ID : 4410093412845
 Option 3 ID : 4410093412846
 Option 4 ID : 4410093412847

Q.3 Seven people, D, A, N, U, B, E and S are sitting in a row, facing north. Only two people sit between N and S. Only B sits to the right of U. Only one person sits between S and U. D sits at some place to the right of E but at some place to the left of A. How many people sit between A and E?

Ans 1. One

2. Two

3. Three

4. Four

Question ID : 4410091618816
 Option 1 ID : 4410096394136
 Option 2 ID : 4410096394137
 Option 3 ID : 4410096394138
 Option 4 ID : 4410096394139

Q.4 The position(s) of how many letters will remain unchanged if each letter in the word HUMANITY is arranged in the English alphabetical order?9815

- Ans 1. Two
 2. One
 3. Three
 4. Zero

Question ID : 441009763970
Option 1 ID : 4410093009875
Option 2 ID : 4410093009874
Option 3 ID : 4410093009876
Option 4 ID : 4410093009873

Q.5 Each of A, B, C, D, I, J and K has an exam on a different day of a week starting from Monday and ending on Sunday of the same week. Only three people have exams between D and J. Only three people have exams between B and I. K has exam on some day before J and on some day after A. Only C has exam before I. How many people have exams after D?

- Ans 1. Two
 2. Three
 3. One
 4. Four

Question ID : 4410091614371
Option 1 ID : 4410096376302
Option 2 ID : 4410096376303
Option 3 ID : 4410096376301
Option 4 ID : 4410096376304

Q.6 If 'A' stands for '+', 'B' stands for 'x', 'C' stands for '+' and 'D' stands for '-', what will come in place of question mark '?' in the following equation?
 $13 B 4 D 6 A 2 C 9 = ?$

- Ans 1. 56
 2. 58
 3. 52
 4. 60

Question ID : 4410091606230
Option 1 ID : 4410096343945
Option 2 ID : 4410096343946
Option 3 ID : 4410096343944
Option 4 ID : 4410096343947

Q.7 In a row of 50 students facing north, Hari is 10th from the right end. If Kapil is 4th to the left of Hari, what is Kapil's position from the left end of the line?

- Ans
- 1. 38th
 - 2. 36th
 - 3. 35th
 - 4. 37th

Question ID : 4410091619660
Option 1 ID : 4410096397499
Option 2 ID : 4410096397497
Option 3 ID : 4410096397496
Option 4 ID : 4410096397498

Q.8 Each vowel in the word FEASIBLE is changed to the letter immediately following it in the English alphabetical order and each consonant is changed to the second letter preceding it in the English alphabetical order. How many letters will appear exactly twice in the new group of letters thus formed?

- Ans
- 1. Four
 - 2. Three
 - 3. Two
 - 4. One

Question ID : 441009216476
Option 1 ID : 441009849946
Option 2 ID : 441009849945
Option 3 ID : 441009849944
Option 4 ID : 441009849943

Q.9 Which of the following letter-number clusters will replace the question mark (?) in the given series to make it logically complete?

FZK51, ZTE70, TNY89, NHS108, ?

- Ans
- 1. HBM127
 - 2. HIM127
 - 3. HBN127
 - 4. JBM127

Question ID : 4410091519089
Option 1 ID : 4410095999618
Option 2 ID : 4410095999619
Option 3 ID : 4410095999621
Option 4 ID : 4410095999620

Q.10 Below are given two sets of numbers. In each set of numbers, a certain mathematical operation on the first number results in the second number. Similarly, certain mathematical operation on the second number results in the third number and so on. Which of the given options follows the same set of operations as in the question?

(NOTE - A two/three-digit number cannot be broken into individual digits for operations e.g. if 37 is followed by 10, the operation cannot be $3+7$ as a two-digit number cannot be broken into individual digits)

13 - 20 - 15 - 25

48 - 55 - 50 - 602397

Ans 1. 42 - 50 - 45 - 56

2. 18 - 25 - 20 - 30

3. 25 - 36 - 31 - 41

4. 14 - 24 - 17 - 27

Question ID : 441009528751

Option 1 ID : 4410092070410

Option 2 ID : 4410092070408

Option 3 ID : 4410092070409

Option 4 ID : 4410092070411



Q.11 Select the correct mirror image of the given figure when the mirror is placed at MN as shown below.



Ans

- 1.
- 2.
- 3.
- 4.

Question ID : 4410091614496
 Option 1 ID : 4410096376802
 Option 2 ID : 4410096376801
 Option 3 ID : 4410096376804
 Option 4 ID : 4410096376803

Q.12 Refer to the following number and symbol series and answer the question that follows. Counting to be done from left to right only. All numbers are single-digit numbers only.
 (Left) 2 8 3 @ & / > 9 8 \ \$ 8 > 5 * ^ 9 4 2 5 ^ (Right)

How many such symbols are there, each of which is immediately preceded by a number and also immediately followed by a number?

- 1. One
- 2. None
- 3. Three
- 4. Two

Question ID : 441009788250
 Option 1 ID : 4410093107000
 Option 2 ID : 4410093106999
 Option 3 ID : 4410093107002
 Option 4 ID : 4410093107001

Q.13 F is the sister of I. I is the brother of G. W is the father of Z. Z is the son of G.
How is Z related to F?

- Ans
- 1. Father
 - 2. Sister's son
 - 3. Sister's husband
 - 4. Son

Question ID : 4410091614472
 Option 1 ID : 4410096376708
 Option 2 ID : 4410096376705
 Option 3 ID : 4410096376706
 Option 4 ID : 4410096376707

Q.14 Refer to the following series and answer the question (all numbers are single digit numbers only. Counting has to be done from left to right)
(Left) 9 1 7 8 3 1 5 7 9 6 2 9 3 6 9 1 5 7 1 5 7 (Right)

How many such even digits are there each of which is immediately preceded by an even digit and also immediately followed by an odd digit?

- Ans
- 1. One
 - 2. Four
 - 3. Two
 - 4. Three

Question ID : 4410091614568
 Option 1 ID : 4410096377085
 Option 2 ID : 4410096377088
 Option 3 ID : 4410096377086
 Option 4 ID : 4410096377087

Q.15 If 'A' stands for '+', 'B' stands for 'x', 'C' stands for '+' and 'D' stands for '-', what will be come in place of question mark '?' in the following equation?
84 A 4 B 8 C 28 D 14 = ? 3674

- Ans
- 1. 184
 - 2. 186
 - 3. 180
 - 4. 182

Question ID : 441009554139
 Option 1 ID : 4410092171872
 Option 2 ID : 4410092171873
 Option 3 ID : 4410092171870
 Option 4 ID : 4410092171871

Q.16 GECB is related to ECAZ in a certain way based on the English alphabetical order. In the same way, XVTS is related to VTRQ. To which of the following is WUSR related, following the same logic?5093

- Ans
- 1. USPP
 - 2. URPP
 - 3. USQP
 - 4. UTPX

Question ID : 441009779056
Option 1 ID : 4410093070230
Option 2 ID : 4410093070229
Option 3 ID : 4410093070227
Option 4 ID : 4410093070228

Q.17 Each of E, F, G, H, Q, R and S has an exam on a different day of a week starting from Monday and ending on Sunday of the same week. Only two people have exam before R. Only one person has exam after Q. Only three people have exam between R and G. Only one person has exam between F and S. H has exam immediately before F. How many people have exam between E and F?

- Ans
- 1. One
 - 2. Two
 - 3. Four
 - 4. Three

Question ID : 4410091618864
Option 1 ID : 4410096394328
Option 2 ID : 4410096394329
Option 3 ID : 4410096394331
Option 4 ID : 4410096394330

Q.18 What should come in place of '?' in the given series?

88 92 76 112 48 ?

- Ans
- 1. 122
 - 2. 148
 - 3. 134
 - 4. 156

Question ID : 4410091528171
Option 1 ID : 4410096035877
Option 2 ID : 4410096035879
Option 3 ID : 4410096035878
Option 4 ID : 4410096035880

Q.19 In a certain code language, 'HARM' is coded as '7859' and 'HEAR' is coded as '8257'. What is the code for 'E' in the given code language?

- Ans
- 1.5
 - 2.8
 - 3.2
 - 4.9

Question ID : 4410091518962
Option 1 ID : 4410095999104
Option 2 ID : 4410095999105
Option 3 ID : 4410095999102
Option 4 ID : 4410095999103

Q.20 Based on the English alphabetical order, three of the following four letter-cluster pairs are alike in a certain way and thus form a group. Which is the one that does not belong to that group? (Note: The odd one out is not based on the number of consonants/vowels or their position in the letter cluster.) 4182

- Ans
- 1. OK - IE
 - 2. PK - JF
 - 3. RN - LH
 - 4. KG - EA

Question ID : 441009790296
Option 1 ID : 4410093115183
Option 2 ID : 4410093115186
Option 3 ID : 4410093115185
Option 4 ID : 4410093115184

Section : General Awareness

Q.1 Which Indian sprinter became the first to clock below 10.2 seconds in the men's 100 m in early July 2025?

- Ans
- 1. Gurindervir Singh
 - 2. Animesh Kujur
 - 3. Gulveer Singh
 - 4. Amlan Borgohain

Question ID : 441009206794
Option 1 ID : 441009813136
Option 2 ID : 441009813137
Option 3 ID : 441009813138
Option 4 ID : 441009813139

Q.2 When did the revolt of 1857 start?

- Ans
- 1. 12 April
 - 2. 15 June
 - 3. 15 August
 - 4. 10 May

Question ID : 441009311157
Option 1 ID : 4410091211120
Option 2 ID : 4410091211119
Option 3 ID : 4410091211122
Option 4 ID : 4410091211121

Q.3 Who among the following was the founder of the Imperial Chola Dynasty?

- Ans
- 1. Vijayalaya
 - 2. Dantidurga
 - 3. Gopala
 - 4. Dharmapala

Question ID : 44100914897
Option 1 ID : 44100959437
Option 2 ID : 44100959438
Option 3 ID : 44100959439
Option 4 ID : 44100959440

Q.4 Which national organization has set up a committee in February 2025 to develop a strategic plan for upgrading AIIMS, New Delhi, into a globally recognized center for medical research and healthcare excellence?

- Ans
- 1. NITI Aayog
 - 2. Reserve Bank of India
 - 3. National Development Council
 - 4. Finance Commission

Question ID : 441009198195
Option 1 ID : 441009780433
Option 2 ID : 441009780434
Option 3 ID : 441009780435
Option 4 ID : 441009780436

Q.5 What causes structural unemployment in the context of India?

- Ans
- 1. Seasonal demand fluctuations
 - 2. Temporary layoffs during economic slowdowns
 - 3. Slowdown in the agriculture
 - 4. Insufficient qualifications to meet job demands due to changes in the economy

Question ID : 441009226975
Option 1 ID : 441009888712
Option 2 ID : 441009888713
Option 3 ID : 441009888714
Option 4 ID : 441009888711

Q.6 Which factor from the following causes the reversal of winds over the Indian subcontinent, leading to the monsoon?

- Ans**
- 1. Movement of cold ocean currents near the Indian coast
 - 2. Formation of the El Niño effect
 - 3. Shifting of the Inter-Tropical Convergence Zone (ITCZ)
 - 4. Western Disturbances from the Mediterranean region

Question ID : 441009341407
Option 1 ID : 4410091331620
Option 2 ID : 4410091331621
Option 3 ID : 4410091331619
Option 4 ID : 4410091331622

Q.7 In November 2024, which Indian company announced to launch MOI-TD, the nation's first space-based AI laboratory, on board ISRO's PSLV-C60 mission?

- Ans**
- 1. Dhruva Space
 - 2. Space Zone
 - 3. Skyroot Aerospace
 - 4. TakeMe2 Space

Question ID : 441009164329
Option 1 ID : 441009650936
Option 2 ID : 441009650937
Option 3 ID : 441009650934
Option 4 ID : 441009650935

Q.8 Which Sikh festival commemorates the birth anniversary of the first spiritual teacher of the faith?

- Ans**
- 1. Guru Nanak Jayanti
 - 2. Hola Mohalla
 - 3. Baisakhi
 - 4. Lohri

Question ID : 441009749590
Option 1 ID : 4410092952190
Option 2 ID : 4410092952191
Option 3 ID : 4410092952192
Option 4 ID : 4410092952193

Q.9 Why is thermal power not considered a renewable energy source?

- Ans**
- 1. It can only be produced in coastal areas
 - 2. It depends on finite coal reserves
 - 3. It requires nuclear fuel
 - 4. It is expensive to produce

Question ID : 441009209791
Option 1 ID : 441009824413
Option 2 ID : 441009824410
Option 3 ID : 441009824412
Option 4 ID : 441009824411

Q.10 What is the main role of NABARD?

- Ans**
- 1. Regulate credit facilities for the development of agriculture
 - 2. Provide insurance to rural workers
 - 3. Control rural population growth
 - 4. Manufacture agricultural tools

Question ID : 441009226495

Option 1 ID : 441009888620

Option 2 ID : 441009888619

Option 3 ID : 441009888622

Option 4 ID : 441009888621

Q.11 Which of the following statements regarding the Inter-State Council under Article 263 is CORRECT?

- Ans**
- 1. It can be established by the President if deemed necessary in the public interest.
 - 2. It is a permanent constitutional body.
 - 3. It can be established by the Chief Justice of India if deemed necessary in the public interest.
 - 4. It has adjudicatory powers to resolve interstate river water disputes.

Question ID : 441009672115

Option 1 ID : 4410092642559

Option 2 ID : 4410092642558

Option 3 ID : 4410092642561

Option 4 ID : 4410092642560

Q.12 According to the Constitution of India, which of the following pairs of urban bodies and their corresponding areas is CORRECTLY matched?

- Ans**
- 1. Municipal Corporation – Transitional area moving from rural to urban
 - 2. Municipal Board – Rural area with no urban characteristic
 - 3. Nagar Panchayat – Fully developed urban metropolis
 - 4. Municipal Council – Smaller urban area

Question ID : 441009671991

Option 1 ID : 4410092642054

Option 2 ID : 4410092642057

Option 3 ID : 4410092642055

Option 4 ID : 4410092642056

Q.13 The Peninsular Plateau of India is mainly composed of which type of rocks among the following?

- Ans**
- 1. Igneous and Metamorphic Rocks
 - 2. Sedimentary Rocks only
 - 3. Sedimentary and Metamorphic Rocks
 - 4. Metamorphic Rocks only

Question ID : 441009321707
Option 1 ID : 4410091253046
Option 2 ID : 4410091253047
Option 3 ID : 4410091253044
Option 4 ID : 4410091253045

Q.14 Which theory is required for a complete explanation of ferromagnetic interactions?

- Ans**
- 1. Electrodynamics
 - 2. Classical mechanics
 - 3. Newtonian
 - 4. Quantum mechanics

Question ID : 441009513484
Option 1 ID : 4410092008987
Option 2 ID : 4410092008984
Option 3 ID : 4410092008985
Option 4 ID : 4410092008986

Q.15 Who won the doubles title at the 2025 Dubai Open Tennis Championship?

- Ans**
- 1. Rohan Bopanna & Hubert Hurkacz
 - 2. Daniil Medvedev & Andrey Rublev
 - 3. Sumit Nagal & Denis Shapovalov
 - 4. Yuki Bhambri & Alexei Popyrin

Question ID : 441009273053
Option 1 ID : 4410091060762
Option 2 ID : 4410091060760
Option 3 ID : 4410091060761
Option 4 ID : 4410091060759

Q.16 According to the Constitution of India, who has the authority to determine the salaries and privileges of the Judges of the Supreme Court?

- Ans**
- 1. The Parliament of India, by law or as specified in the Second Schedule
 - 2. The President of India, by notification in the Official Gazette
 - 3. The Ministry of Law and Justice, under executive order
 - 4. The Chief Justice of India, in consultation with the Council of Ministers

Question ID : 441009672166
Option 1 ID : 4410092642760
Option 2 ID : 4410092642758
Option 3 ID : 4410092642761
Option 4 ID : 4410092642759

Q.17 The ICC Champions Trophy 2025 was won by which cricket team?

- Ans
- 1. England
 - 2. Pakistan
 - 3. Australia
 - 4. India

Question ID : 4410091561074
Option 1 ID : 4410096166468
Option 2 ID : 4410096166469
Option 3 ID : 4410096166467
Option 4 ID : 4410096166466

Q.18 The bond between oxygen and hemoglobin is _____.

- Ans
- 1. Ionic
 - 2. Reversible
 - 3. Permanent
 - 4. Irreversible

Question ID : 441009512743
Option 1 ID : 4410092006105
Option 2 ID : 4410092006104
Option 3 ID : 4410092006103
Option 4 ID : 4410092006102

Q.19 The Qutub Minar, a UNESCO World Heritage Site, is located in which Indian city?

- Ans
- 1. Delhi
 - 2. Hyderabad
 - 3. Jaipur
 - 4. Agra

Question ID : 441009749087
Option 1 ID : 4410092950169
Option 2 ID : 4410092950171
Option 3 ID : 4410092950170
Option 4 ID : 4410092950168

Q.20 When did Tilka Manjhi start the Manjhi Revolt against the British regime in Bihar?

- Ans
- 1. 1785
 - 2. 1833
 - 3. 1850
 - 4. 1832

Question ID : 441009106057
Option 1 ID : 441009422269
Option 2 ID : 441009422271
Option 3 ID : 441009422272
Option 4 ID : 441009422270

Section : Arithmetical and Numerical Ability

Q.1 Find the simple interest (in ₹) on ₹3500 as a sum borrowed at 8% per year rate of interest for 4 years.1430

- Ans
- 1. 1160
 - 2. 1120
 - 3. 1060
 - 4. 1080

Question ID : 441009852712
Option 1 ID : 4410093363821
Option 2 ID : 4410093363820
Option 3 ID : 4410093363822
Option 4 ID : 4410093363823

Q.2 Suresh bought some quantity of barley for ₹5,704. Half of it is sold at a profit of 39%. If Suresh wishes to make a profit of 7% on the whole, find the selling price (in ₹) of the remaining barley.1689

- Ans
- 1. 2,496
 - 2. 2,139
 - 3. 2,990
 - 4. 1,492

Question ID : 441009895002
Option 1 ID : 4410093534081
Option 2 ID : 4410093534078
Option 3 ID : 4410093534080
Option 4 ID : 4410093534079

Q.3 The average weight of a family of five members whose weights are 40 kg, 49 kg, 57 kg, 76 kg and 38 kg is:

- Ans
- 1. 52 kg
 - 2. 51 kg
 - 3. 54 kg
 - 4. 53 kg

Question ID : 441009582036
Option 1 ID : 4410092283270
Option 2 ID : 4410092283272
Option 3 ID : 4410092283273
Option 4 ID : 4410092283271

Q.4 The dimensions of a brick are 8.5 inch, 5.6 inch and 4.3 inch. Find volume (in inches³) of biggest cube that can be cut out of the brick. (Rounded off to 2 decimal places)

- Ans
- 1. 89.07
 - 2. 79.51
 - 3. 86.12
 - 4. 83.42

Question ID : 4410099369
Option 1 ID : 44100937258
Option 2 ID : 44100937255
Option 3 ID : 44100937257
Option 4 ID : 44100937256

Q.5 If Kundan's salary increases by 15% in the first year and by 1 the salary after two years?

- Ans
- 1. 25.5%
 - 2. 27.5%
 - 3. 26.5%
 - 4. 28.5%

Question ID : 44100911093
Option 1 ID : 44100944199
Option 2 ID : 44100944201
Option 3 ID : 44100944200
Option 4 ID : 44100944202

Q.6 The population of a town increases by 10% every year. If the current population is 5,50,000, what will be the population of this town after 2 years?

- Ans
- 1. 6,60,000
 - 2. 6,70,000
 - 3. 6,50,000
 - 4. 6,65,500

Question ID : 44100947383
Option 1 ID : 441009188627
Option 2 ID : 441009188629
Option 3 ID : 441009188628
Option 4 ID : 441009188626

Q.7 A shopkeeper marks an article at ₹2,500. During a sale, he offers a discount of 12% on the marked price. However, the customer also has a coupon for an additional 5% off on the discounted price. What is the final price paid by the customer?

- Ans 1. ₹2,090
 2. ₹2,100
 3. ₹2,075
 4. ₹2,125

Question ID : 4410091622405
Option 1 ID : 4410096408393
Option 2 ID : 4410096408392
Option 3 ID : 4410096408395
Option 4 ID : 4410096408394

Q.8 A sailor travels a distance of 32 km in the upstream and 48 km in the downstream. Find the speed (in km/hr) of the stream.

- Ans 1. 3
 2. 4
 3. 2
 4. 1

Question ID : 44100911952
Option 1 ID : 44100947613
Option 2 ID : 44100947614
Option 3 ID : 44100947612
Option 4 ID : 44100947611

Q.9 The HCF of two numbers is 12, and one of the numbers is 36. What is the smallest possible value of the other number?

- Ans 1. 18
 2. 12
 3. 36
 4. 24

Question ID : 44100919419
Option 1 ID : 44100977408
Option 2 ID : 44100977407
Option 3 ID : 44100977410
Option 4 ID : 44100977409

Q.10 A shopkeeper has 500 kg of tea, part of which he sells at 8% profit and the rest at 18% profit. The shopkeeper gains 10% on the whole. The quantity (in kg) he sold at 8% profit is:

- Ans
- 1. 350
 - 2. 300
 - 3. 400
 - 4. 360

Question ID : 441009305004
Option 1 ID : 4410091186687
Option 2 ID : 4410091186688
Option 3 ID : 4410091186686
Option 4 ID : 4410091186689

Q.11 The LCM of four consecutive natural numbers is 840. Find the smallest number.

- Ans
- 1. 5
 - 2. 8
 - 3. 4
 - 4. 6

Question ID : 441009525625
Option 1 ID : 4410092057919
Option 2 ID : 4410092057922
Option 3 ID : 4410092057920
Option 4 ID : 4410092057921

Q.12 The diameter of a solid metallic sphere is 12 cm. It is melted and drawn into a wire with a diameter of 8 mm having a uniform cross-section. Find the length of the wire.⁷¹⁰

- Ans
- 1. 1200 cm
 - 2. 1800 cm
 - 3. 1600 cm
 - 4. 1400 cm

Question ID : 441009621278
Option 1 ID : 4410092439244
Option 2 ID : 4410092439247
Option 3 ID : 4410092439246
Option 4 ID : 4410092439245

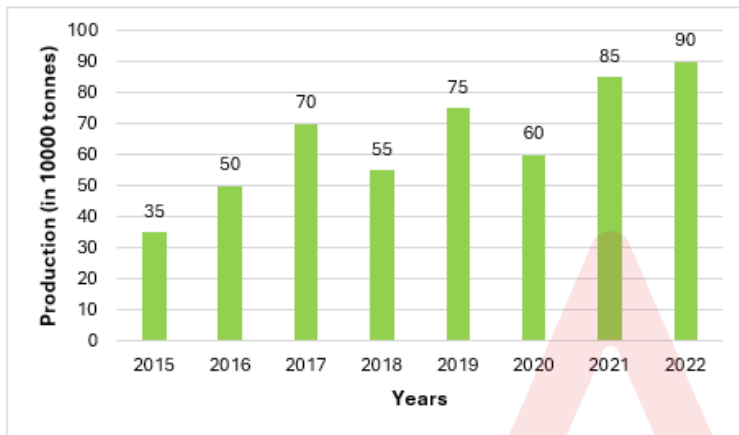
Q.13 A man travels three equal distances with speeds 10 km/hr, 12 km/hr and 15 km/hr. If he takes a total time of 7 hours, what is the total distance (in km)?

- Ans
- 1.56
 - 2.90
 - 3.84
 - 4.72

Question ID : 4410098561
 Option 1 ID : 44100933976
 Option 2 ID : 44100933979
 Option 3 ID : 44100933978
 Option 4 ID : 44100933977

Q.14 Study the given bar graph and answer the question that follows

The given bar graph depicts the production of fertilisers by a company (in 10000 tonnes) over the years.



What was the percentage increase in the production of fertilisers in 2022 compared to that in 2020?

- Ans
- 1.50%
 - 2.45%
 - 3.40%
 - 4.60%

Question ID : 44100921477
 Option 1 ID : 44100985661
 Option 2 ID : 44100985660
 Option 3 ID : 44100985659
 Option 4 ID : 44100985662

Q.15 The slant height of a solid cone is 10 cm, and its radius is 6 cm

- Ans
- 1.94 π
 - 2.90 π
 - 3.96 π
 - 4.92 π

Question ID : 44100920310
Option 1 ID : 44100980976
Option 2 ID : 44100980978
Option 3 ID : 44100980975
Option 4 ID : 44100980977

Q.16 Two taps can fill a cistern in 3 hours and 36 hours, respectively. A third tap can empty it in 4 hours. How long (in hours) will it take to fill one-third of the empty cistern, if all of them are opened together?³⁹²⁵

- Ans
- 1.4
 - 2.10
 - 3.3
 - 4.9

Question ID : 441009897238
Option 1 ID : 4410093543023
Option 2 ID : 4410093543025
Option 3 ID : 4410093543022
Option 4 ID : 4410093543024

Q.17 If 28, K, 56 and 136 are in continued proportion, then find the value of K.

- Ans
- 1.62
 - 2.68
 - 3.79
 - 4.75

Question ID : 4410096016
Option 1 ID : 44100923841
Option 2 ID : 44100923842
Option 3 ID : 44100923844
Option 4 ID : 44100923843

Q.18 A shopkeeper buys goods at 20% discount on the labeled price and sells them at the labeled price. What is his profit percentage?

- Ans
- 1.20%
 - 2.16%
 - 3.30%
 - 4.25%

Question ID : 441009162221
Option 1 ID : 4410096407672
Option 2 ID : 4410096407674
Option 3 ID : 4410096407675
Option 4 ID : 4410096407673

Q.19 A and B can do a piece of work in 5 days and 8 days, respectively. How many days will both take to complete the work together?

- Ans
- 1. $4\frac{1}{4}$ days
 - 2. $2\frac{1}{5}$ days
 - 3. $5\frac{1}{13}$ days
 - 4. $3\frac{1}{13}$ days

Question ID : 4410096051
Option 1 ID : 44100923983
Option 2 ID : 44100923981
Option 3 ID : 44100923984
Option 4 ID : 44100923982

Q.20 A sum of ₹13,020 is to be divided among A, B, C and D such that the shares of A and B are in the ratio 2 : 3, the shares of B and C are in the ratio 4 : 5, and the shares of C and D are in the ratio 6 : 7. Find the share of A.

- Ans
- 1. ₹1,849
 - 2. ₹1,948
 - 3. ₹1,894
 - 4. ₹1,984

Question ID : 441009899132
Option 1 ID : 4410093550601
Option 2 ID : 4410093550599
Option 3 ID : 4410093550600
Option 4 ID : 4410093550598

Section : English Language and Comprehension

Q.1 In the given question, a statement divided into different segments is given. Rearrange all the segments to form a coherent statement.

- (A) the teacher encouraged
- (B) clearly during the group activity
- (C) them to think critically and
- (D) express their opinions

- Ans
- 1. ACDB
 - 2. DBCA
 - 3. BDCA
 - 4. ABCD

Question ID : 4410091132341
Option 1 ID : 4410094464770
Option 2 ID : 4410094464772
Option 3 ID : 4410094464773
Option 4 ID : 4410094464771

Q.2 Parts of a sentence are given below in jumbled order. Arrange the parts in the correct order to form a meaningful sentence.

The inclusiveness of Indian society
P: of every caste and creed
Q: by creating space for people
R: of social and cultural life
S: not only acknowledges differences
T: but also weaves them into the fabric

- Ans
- 1. PSQTR
 - 2. SQPTR
 - 3. TPQSR
 - 4. SPTRQ

Question ID : 4410091096150
Option 1 ID : 4410094321978
Option 2 ID : 4410094321977
Option 3 ID : 4410094321980
Option 4 ID : 4410094321979

Q.3 Select the appropriate preposition to fill in the blank.

The discussion will take place _____ the senior members of the committee.

- Ans
- 1. across
 - 2. by
 - 3. among
 - 4. between

Question ID : 4410091027497
Option 1 ID : 4410094061528
Option 2 ID : 4410094061529
Option 3 ID : 4410094061530
Option 4 ID : 4410094061531

Q.4 Identify the relationship between the first pair of words and choose the option that best completes the analogy.

Metaphor : Poetry :: Statistic : ?

- Ans
- 1. Fiction
 - 2. Grammar
 - 3. Analysis
 - 4. Painting

Question ID : 4410091532192
Option 1 ID : 4410096051818
Option 2 ID : 4410096051821
Option 3 ID : 4410096051819
Option 4 ID : 4410096051820

Q.5 Select the option that can be used as a one-word substitute for the underlined segment in the given sentence.

My college professor is a person who cannot be corrected or improved.

- Ans
- 1. incorrigible
 - 2. insolent
 - 3. incurable
 - 4. infallible

Question ID : 441009159894
Option 1 ID : 441009634220
Option 2 ID : 441009634219
Option 3 ID : 441009634222
Option 4 ID : 441009634221

Q.6 Fill in the blanks with the correct option.

He quoted from ___ Bible and referred to ___ Book of Genesis.

- Ans
- 1. a, the
 - 2. the, the
 - 3. a, a
 - 4. the, a

Question ID : 4410091126885
Option 1 ID : 4410094443096
Option 2 ID : 4410094443095
Option 3 ID : 4410094443098
Option 4 ID : 4410094443097

Q.7 Choose the word that is similar in meaning to the underlined word.

The children were delighted by the magician's amusing tricks.

- Ans
- 1. tedious
 - 2. impressive
 - 3. sombre
 - 4. entertaining

Question ID : 4410091555195
Option 1 ID : 4410096143391
Option 2 ID : 4410096143393
Option 3 ID : 4410096143394
Option 4 ID : 4410096143392

Q.8 Select the option with the correct spelling to replace the underlined word in the given sentence.

The problem was, however, solved rather ingenously.

- Ans
- 1. ingeniously
 - 2. ingeniously
 - 3. inginiously
 - 4. ingeneously

Question ID : 4410091544941
Option 1 ID : 4410096102817
Option 2 ID : 4410096102816
Option 3 ID : 4410096102815
Option 4 ID : 4410096102818

Q.9 In the following sentence, a segment is highlighted. You are required to replace the highlighted text with the correct proverb given in the options.

Even though both negotiators were known for their cunning, in this case, it was truly a matter of one cunning person matching wits with another.

- Ans
- 1. empty vessels make the most noise
 - 2. diamonds cut diamonds
 - 3. birds of a feather flock together
 - 4. every ass likes to hear himself bray

Question ID : 4410091691008
Option 1 ID : 4410096670240
Option 2 ID : 4410096670238
Option 3 ID : 4410096670241
Option 4 ID : 4410096670239

Q.10 I don't want to spoil your plans, but the concert has been cancelled due to heavy rain.

Which idiom can best replace the underlined words?

- Ans
- 1. Rain on Your Parade
 - 2. Take a rain check
 - 3. Like a cakewalk
 - 4. Beat Around the Bush

Question ID : 4410091275758
Option 1 ID : 4410095035027
Option 2 ID : 4410095035028
Option 3 ID : 4410095035025
Option 4 ID : 4410095035026

Q.11 Choose the most appropriate option to fill in the given blanks.

_____ he is young, he is very wise _____ mature for his age.

- Ans
- 1. Even though, or
 - 2. Though, but
 - 3. Although, and
 - 4. Although, but

Question ID : 4410091126963
Option 1 ID : 4410094443406
Option 2 ID : 4410094443404
Option 3 ID : 4410094443407
Option 4 ID : 4410094443405

Q.12 Select the option that is the most appropriate antonym of the highlighted word in the given sentence.

He was known as a miser who rarely spent money.

- Ans
- 1. spendthrift
 - 2. stingy
 - 3. frugal
 - 4. thrifty

Question ID : 4410091603197
Option 1 ID : 4410096331984
Option 2 ID : 4410096331985
Option 3 ID : 4410096331987
Option 4 ID : 4410096331986

Q.13 Select the most appropriate option to fill in the blank.

_____ large quantity of petrol escaped from the tank.

- Ans
- 1. No article required
 - 2. A
 - 3. The
 - 4. An

Question ID : 441009204906
Option 1 ID : 441009805893
Option 2 ID : 441009805890
Option 3 ID : 441009805891
Option 4 ID : 441009805892

Q.14 Choose the correct verb to complete the sentence.

Yesterday, she _____ her homework before dinner.

- Ans
- 1. doing
 - 2. do
 - 3. does
 - 4. did

Question ID : 4410091123450

Option 1 ID : 4410094429366

Option 2 ID : 4410094429365

Option 3 ID : 4410094429368

Option 4 ID : 4410094429367

Q.15 Choose the correct spelling of the highlighted word from the given options.

The students protested against the sudden separation of their class sections.

- Ans
- 1. sepeaition
 - 2. saparetion
 - 3. separasion
 - 4. separation

Question ID : 4410091362884

Option 1 ID : 4410095383452

Option 2 ID : 4410095383454

Option 3 ID : 4410095383455

Option 4 ID : 4410095383453



Comprehension:

Read the passage carefully and answer the following questions.

The rise of digital communication, from emails to instant messaging, has led to a significant decrease in the volume of physical letters. This posed a major challenge to India Post's traditional business model and its primary source of income. As a direct result of this decline, India Post strategically leveraged its unparalleled network of over 1.5 lakh post offices. It became a key logistics partner for e-commerce companies like Amazon and Flipkart. This partnership has caused a dramatic increase in the volume of packages and parcels handled, effectively compensating for the loss from letter mail.

The expansion of online retail has fundamentally reshaped the purpose of India Post. The boom in e-commerce has provided a new and essential source of revenue for the postal service. India Post has capitalised on its unprecedented network of over 1.5 lakh post offices, especially its significant presence in rural areas, to become a vital logistics partner for major e-commerce platforms like Amazon and Flipkart. This collaboration has resulted in a substantial increase in the volume of packages and parcels it manages, effectively offsetting the decline from traditional mail. India Post is also proactively partnering with various organisations and government initiatives to support rural entrepreneurs, including women-led self-help groups. For small vendors, using India Post allows them to leverage the service's long-standing reputation for trust, which helps build consumer confidence, especially in non-metro areas where the postman is a familiar and respected figure. Furthermore, India Post's services are more economical than private courier companies. These lower shipping costs can lead to more competitive product pricing, making online shopping a more appealing option for budget-conscious consumers.

SubQuestion No : 16

Q.16 Identify the correct structure of the passage.

- Ans**
- 1. compare and contrast
 - 2. chronological
 - 3. cause and effect
 - 4. sequence

Question ID : 4410091300940

Option 1 ID : 4410095136068

Option 2 ID : 4410095136066

Option 3 ID : 4410095136067

Option 4 ID : 4410095136069

Comprehension:

Read the passage carefully and answer the following questions.

The rise of digital communication, from emails to instant messaging, has led to a significant decrease in the volume of physical letters. This posed a major challenge to India Post's traditional business model and its primary source of income. As a direct result of this decline, India Post strategically leveraged its unparalleled network of over 1.5 lakh post offices. It became a key logistics partner for e-commerce companies like Amazon and Flipkart. This partnership has caused a dramatic increase in the volume of packages and parcels handled, effectively compensating for the loss from letter mail.

The expansion of online retail has fundamentally reshaped the purpose of India Post. The boom in e-commerce has provided a new and essential source of revenue for the postal service. India Post has capitalised on its unprecedented network of over 1.5 lakh post offices, especially its significant presence in rural areas, to become a vital logistics partner for major e-commerce platforms like Amazon and Flipkart. This collaboration has resulted in a substantial increase in the volume of packages and parcels it manages, effectively offsetting the decline from traditional mail. India Post is also proactively partnering with various organisations and government initiatives to support rural entrepreneurs, including women-led self-help groups. For small vendors, using India Post allows them to leverage the service's long-standing reputation for trust, which helps build consumer confidence, especially in non-metro areas where the postman is a familiar and respected figure. Furthermore, India Post's services are more economical than private courier companies. These lower shipping costs can lead to more competitive product pricing, making online shopping a more appealing option for budget-conscious consumers.

SubQuestion No : 17

Q.17 Choose the correct summary of the passage.

- Ans** 1. The passage summarises that traditional letter system was a convenient mode for transaction.
2. The passage summarises that the growth of the e-commerce facility has completely revolutionised India Post by making it a crucial financial inclusion partner and a key supporter of local businesses.
3. The passage summarises that the government has encouraged new platforms like Amazon and Flipkart to flourish by excluding India Post from the logistics and supply chain business.
4. The passage summarises that the rise of e-commerce has been the sole factor in the decline of traditional letter mail.

Question ID : 4410091300941
Option 1 ID : 4410095136071
Option 2 ID : 4410095136072
Option 3 ID : 4410095136073
Option 4 ID : 4410095136070

Comprehension:

Read the passage carefully and answer the following questions.

The rise of digital communication, from emails to instant messaging, has led to a significant decrease in the volume of physical letters. This posed a major challenge to India Post's traditional business model and its primary source of income. As a direct result of this decline, India Post strategically leveraged its unparalleled network of over 1.5 lakh post offices. It became a key logistics partner for e-commerce companies like Amazon and Flipkart. This partnership has caused a dramatic increase in the volume of packages and parcels handled, effectively compensating for the loss from letter mail.

The expansion of online retail has fundamentally reshaped the purpose of India Post. The boom in e-commerce has provided a new and essential source of revenue for the postal service. India Post has capitalised on its unprecedented network of over 1.5 lakh post offices, especially its significant presence in rural areas, to become a vital logistics partner for major e-commerce platforms like Amazon and Flipkart. This collaboration has resulted in a substantial increase in the volume of packages and parcels it manages, effectively offsetting the decline from traditional mail. India Post is also proactively partnering with various organisations and government initiatives to support rural entrepreneurs, including women-led self-help groups. For small vendors, using India Post allows them to leverage the service's long-standing reputation for trust, which helps build consumer confidence, especially in non-metro areas where the postman is a familiar and respected figure. Furthermore, India Post's services are more economical than private courier companies. These lower shipping costs can lead to more competitive product pricing, making online shopping a more appealing option for budget-conscious consumers.

SubQuestion No : 18

Q.18 Select an appropriate title for the passage.

- Ans**
- 1. Financial Inclusion of Rural People: A Key Initiative by the Indian Government
 - 2. The Decline of Traditional Letter Writing in the Digital Age
 - 3. The Evolution of India Post in the Age of e-Commerce
 - 4. The Role of Amazon and Flipkart in E-commerce

Question ID : 4410091300942

Option 1 ID : 4410095136077

Option 2 ID : 4410095136075

Option 3 ID : 4410095136076

Option 4 ID : 4410095136074

Comprehension:

Read the passage carefully and answer the following questions.

The rise of digital communication, from emails to instant messaging, has led to a significant decrease in the volume of physical letters. This posed a major challenge to India Post's traditional business model and its primary source of income. As a direct result of this decline, India Post strategically leveraged its unparalleled network of over 1.5 lakh post offices. It became a key logistics partner for e-commerce companies like Amazon and Flipkart. This partnership has caused a dramatic increase in the volume of packages and parcels handled, effectively compensating for the loss from letter mail.

The expansion of online retail has fundamentally reshaped the purpose of India Post. The boom in e-commerce has provided a new and essential source of revenue for the postal service. India Post has capitalised on its unprecedented network of over 1.5 lakh post offices, especially its significant presence in rural areas, to become a vital logistics partner for major e-commerce platforms like Amazon and Flipkart. This collaboration has resulted in a substantial increase in the volume of packages and parcels it manages, effectively offsetting the decline from traditional mail. India Post is also proactively partnering with various organisations and government initiatives to support rural entrepreneurs, including women-led self-help groups. For small vendors, using India Post allows them to leverage the service's long-standing reputation for trust, which helps build consumer confidence, especially in non-metro areas where the postman is a familiar and respected figure. Furthermore, India Post's services are more economical than private courier companies. These lower shipping costs can lead to more competitive product pricing, making online shopping a more appealing option for budget-conscious consumers.

SubQuestion No : 19

Q.19 Which of the following is a fact mentioned in the passage?

- Ans** ✓ 1. For small villages, India Post is a reputed institution; hence, it creates trust between vendors and consumers.
- ✗ 2. Due to the rise of e-commerce, there is a substantial decrease in the demand for India Post's services.
- ✗ 3. India Post is expensive and slow in logistical supply.
- ✗ 4. India Post ensures financial exclusion of rural entrepreneurs.

Question ID : 4410091300943

Option 1 ID : 4410095136081

Option 2 ID : 4410095136080

Option 3 ID : 4410095136078

Option 4 ID : 4410095136079

Comprehension:

Read the passage carefully and answer the following questions.

The rise of digital communication, from emails to instant messaging, has led to a significant decrease in the volume of physical letters. This posed a major challenge to India Post's traditional business model and its primary source of income. As a direct result of this decline, India Post strategically leveraged its unparalleled network of over 1.5 lakh post offices. It became a key logistics partner for e-commerce companies like Amazon and Flipkart. This partnership has caused a dramatic increase in the volume of packages and parcels handled, effectively compensating for the loss from letter mail.

The expansion of online retail has fundamentally reshaped the purpose of India Post. The boom in e-commerce has provided a new and essential source of revenue for the postal service. India Post has capitalised on its unprecedented network of over 1.5 lakh post offices, especially its significant presence in rural areas, to become a vital logistics partner for major e-commerce platforms like Amazon and Flipkart. This collaboration has resulted in a substantial increase in the volume of packages and parcels it manages, effectively offsetting the decline from traditional mail. India Post is also proactively partnering with various organisations and government initiatives to support rural entrepreneurs, including women-led self-help groups. For small vendors, using India Post allows them to leverage the service's long-standing reputation for trust, which helps build consumer confidence, especially in non-metro areas where the postman is a familiar and respected figure. Furthermore, India Post's services are more economical than private courier companies. These lower shipping costs can lead to more competitive product pricing, making online shopping a more appealing option for budget-conscious consumers.

SubQuestion No : 20

Q.20 Select the correct synonym for the word 'leverage' given in the passage.

- Ans
- 1. converge
 - 2. affluent
 - 3. influence
 - 4. inflation

Question ID : 4410091300944

Option 1 ID : 4410095136084

Option 2 ID : 4410095136083

Option 3 ID : 4410095136082

Option 4 ID : 4410095136085

Section : Hindi Language and Comprehension

Q.1 दिए गए वाक्य के रिक्त स्थान में क्रिया शब्द का प्रयोग करें -
'शीला ने सुबह सेब था।'

- Ans
- 1. खा
 - 2. खाता
 - 3. खाओ
 - 4. खाया

Question ID : 4410091528072

Option 1 ID : 4410096035481

Option 2 ID : 4410096035483

Option 3 ID : 4410096035484

Option 4 ID : 4410096035482

Q.2 दिये गये वाक्य के किस भाग में वर्तनी की त्रुटि है?

प्रेमचंद के साहित्यिक जीवन का चर्मोत्कार्ष उनके गोदान उपन्यास से माना जाता है।

- Ans
- 1. साहित्यिक जीवन का
 - 2. उनके गोदान उपन्यास से माना जाता है।
 - 3. प्रेमचंद के
 - 4. चर्मोत्कार्ष

Question ID : 4410091547233
Option 1 ID : 4410096111804
Option 2 ID : 4410096111806
Option 3 ID : 4410096111803
Option 4 ID : 4410096111805

Q.3 निम्न में से 'मुर्गा चुगे, अपना पेट भरे' लोकोक्ति का सही अर्थ कौन-सा है ?

- Ans
- 1. गरीब के लिए थोड़ी हानि भी असह्य है
 - 2. जोखिम का काम कौन करेगा
 - 3. जो भी करता है, अपने लिए ही करता है
 - 4. कोई पास नहीं फटक सकता

Question ID : 4410091626337
Option 1 ID : 4410096423739
Option 2 ID : 4410096423737
Option 3 ID : 4410096423738
Option 4 ID : 4410096423740

Q.4 निम्नलिखित वाक्य के रिक्त स्थान में उचित क्रिया शब्द का प्रयोग करें -
'रंजीत निबंध रहा है।'

- Ans
- 1. लिखना
 - 2. लिखो
 - 3. लिख
 - 4. लिखवाना

Question ID : 4410091242003
Option 1 ID : 4410094901360
Option 2 ID : 4410094901361
Option 3 ID : 4410094901362
Option 4 ID : 4410094901363

Q.5 दिए गए वाक्य में संख्यावाचक विशेषण शब्द का चयन करके रिक्त स्थान की पूर्ति करें -
अंतर्राष्ट्रीय विज्ञान सम्मेलन में-----शोधकर्ताओं ने असाधारण प्रदर्शन किया।

- Ans
- 1. भारतीय
 - 2. पाँच हजार
 - 3. वरिष्ठ
 - 4. युवा

Question ID : 4410091547156
Option 1 ID : 4410096111500
Option 2 ID : 4410096111498
Option 3 ID : 4410096111497
Option 4 ID : 4410096111499

Q.6 उपयुक्त कारक चिह्न का चयन कर वाक्य को पूर्ण कीजिए।
मायरा बस स्कूल जाती है।

- Ans
- 1. को
 - 2. से
 - 3. के लिए
 - 4. ऊपर

Question ID : 4410091297577
Option 1 ID : 4410095122415
Option 2 ID : 4410095122412
Option 3 ID : 4410095122414
Option 4 ID : 4410095122413

Q.7 उनकी छाती धड़कने लगी।
उपर्युक्त रेखांकित शब्द का पर्यायवाची क्या होगा ?

- Ans
- 1. फेफड़ा
 - 2. वक्ष
 - 3. नितंब
 - 4. यकृत

Question ID : 4410091624850
Option 1 ID : 4410096417927
Option 2 ID : 4410096417930
Option 3 ID : 4410096417929
Option 4 ID : 4410096417928

Q.8 'आदि से अंत तक' वाक्यांश के लिए सार्थक शब्द क्या होगा?

- Ans
- 1. आमरण
 - 2. आद्योपांत
 - 3. आजीवन
 - 4. आन्तगर्व

Question ID : 4410091546757
Option 1 ID : 4410096109898
Option 2 ID : 4410096109896
Option 3 ID : 4410096109895
Option 4 ID : 4410096109897

Q.9 निम्न में से 'तीर हाथ से निकल जाना' मुहावरे का सही अर्थ कौन-सा है ?

- Ans
- 1. झगड़ा खड़ा करना
 - 2. स्थिति का वश से बाहर हो जाना
 - 3. उपाय निकालना
 - 4. झूठा कलंक लगाना

Question ID : 4410091626279
Option 1 ID : 4410096423508
Option 2 ID : 4410096423505
Option 3 ID : 4410096423506
Option 4 ID : 4410096423507

Q.10 "चुटकी लेना" - मुहावरे का क्या अर्थ है?

- Ans
- 1. बहुत चालाक होना
 - 2. हँसी उड़ाना
 - 3. तुरंत काम कर लेना
 - 4. लाभ ही लाभ होना

Question ID : 4410091618323
Option 1 ID : 4410096392157
Option 2 ID : 4410096392155
Option 3 ID : 4410096392156
Option 4 ID : 4410096392158

Q.11 'आगे नाथ न पीछे पगहा' लोकोक्ति का क्या अर्थ है?

- Ans
- 1. अकेला आदमी लाचार होता है
 - 2. जिसका कोई न हो
 - 3. हर हालत में एक जैसी विरक्ति
 - 4. विश्वासपात्र न होना

Question ID : 4410091547203
Option 1 ID : 4410096111685
Option 2 ID : 4410096111684
Option 3 ID : 4410096111686
Option 4 ID : 4410096111683

Q.12 नीचे दिए गए वाक्य व्युत्क्रम में है चार विकल्पों कोई एक वाक्य जो क्रम में है उसका चयन कीजिए।

- Ans
- 1. माँ के सर्दियों में बन गई है आदत झुककर चलने की
 - 2. आदत बन गई है झुककर चलने की सर्दियों में माँ के
 - 3. झुककर चलने की बन गई है आदत माँ के सर्दियों में
 - 4. सर्दियों में माँ के झुककर चलने की आदत बन गई है

Question ID : 441009275633
Option 1 ID : 4410091070709
Option 2 ID : 4410091070711
Option 3 ID : 4410091070712
Option 4 ID : 4410091070710

Q.13 निम्न में से वाक्य में रेखांकित शब्द का विलोम शब्द कौन-सा है ?
'घर का भोजन अच्छा होता है।'

- Ans
- 1. बुराई
 - 2. अनुज
 - 3. बुरा
 - 4. सुपाच्य

Question ID : 4410091626532
Option 1 ID : 4410096424503
Option 2 ID : 4410096424502
Option 3 ID : 4410096424500
Option 4 ID : 4410096424501

Q.14 रिक्त स्थान की पूर्ति उपयुक्त गुणवाचक विशेषण से करें-
..... मानवों की सेवा करो।

- Ans
- 1. सभी
 - 2. इन्हीं
 - 3. पीड़ित
 - 4. कुछ

Question ID : 4410091251244
Option 1 ID : 4410094938160
Option 2 ID : 4410094938157
Option 3 ID : 4410094938159
Option 4 ID : 4410094938158

Q.15 दिए गए वाक्यों में से वर्तनी की दृष्टि से शुद्ध वाक्य का चयन कीजिए।

- Ans
- 1. मेरे उनसे परिचय कर दो।
 - 2. मेरा उनसे परिचय करा दो।
 - 3. मेरा उनसे परिजय करा दो।
 - 4. मेरा उनसे परीचय करा दो।

Question ID : 4410091626463
Option 1 ID : 4410096424227
Option 2 ID : 4410096424225
Option 3 ID : 4410096424226
Option 4 ID : 4410096424224

Comprehension:

निम्नलिखित प्रश्नों के उत्तर दिए गए गद्यांश के आधार पर दीजिए।
भाषा शब्द संस्कृत के भाष् धातु से बना है। जिसका अर्थ है- बोलना। कक्षा में अध्यापक अपनी बात बोलकर समझाते हैं और छात्र सुनकर उस बात को समझते हैं। बच्चा माता-पिता से बोलकर अपने मन के भाव प्रकट करता है और वे उसकी बात सुनकर समझते हैं। इसी प्रकार, छात्र भी अध्यापक द्वारा समझायी गयी बात को लिखकर व्यक्त करते हैं और अध्यापक उसे पढ़कर मूल्यांकन करते हैं। भावों का आदान-प्रदान करने के लिए सभी प्राणियों द्वारा मन की भाषा का प्रयोग किया जाता है। पशु पक्षियों की बोलियों को भाषा नहीं कहा जाता। इसके द्वारा मनुष्य के भावों, विचारों और भावनाओं को व्यक्त किया जाता है। भाषा की परिभाषा देना कठिन कार्य है। भाषा वैज्ञानिकों ने इसकी अनेक परिभाषा दी हैं। किन्तु ये परिभाषाएं पूर्ण नहीं हैं। हर एक परिभाषा में कुछ न कुछ त्रुटि पायी जाती है। सार्थक शब्दों के समूह या संकेत को भाषा कहते हैं। यह संकेत स्पष्ट होना चाहिए। मनुष्य के जटिल मनोभावों को भाषा व्यक्त करती है; किन्तु केवल संकेत ही भाषा नहीं हो पाती है।

SubQuestion No : 16**Q.16** गद्यांश के लिए उपयुक्त शीर्षक का चयन कीजिए।

- Ans
- 1. परिभाषा
 - 2. लिंग
 - 3. व्याकरण
 - 4. भाषा

Question ID : 4410091624901
Option 1 ID : 4410096418130
Option 2 ID : 4410096418129
Option 3 ID : 4410096418128
Option 4 ID : 4410096418127

Comprehension:

निम्नलिखित प्रश्नों के उत्तर दिए गए गद्यांश के आधार पर दीजिए।
भाषा शब्द संस्कृत के भाष् धातु से बना है। जिसका अर्थ है- बोलना। कक्षा में अध्यापक अपनी बात बोलकर समझाते हैं और छात्र सुनकर उस बात को समझते हैं। बच्चा माता-पिता से बोलकर अपने मन के भाव प्रकट करता है और वे उसकी बात सुनकर समझते हैं। इसी प्रकार, छात्र भी अध्यापक द्वारा समझायी गयी बात को लिखकर व्यक्त करते हैं और अध्यापक उसे पढ़कर मूल्यांकन करते हैं। भावों का आदान-प्रदान करने के लिए सभी प्राणियों द्वारा मन की भाषा का प्रयोग किया जाता है। पशु पक्षियों की बोलियों को भाषा नहीं कहा जाता। इसके द्वारा मनुष्य के भावों, विचारों और भावनाओं को व्यक्त किया जाता है। भाषा की परिभाषा देना कठिन कार्य है। भाषा वैज्ञानिकों ने इसकी अनेक परिभाषा दी हैं। किन्तु ये परिभाषाएं पूर्ण नहीं हैं। हर एक परिभाषा में कुछ न कुछ त्रुटि पायी जाती है। सार्थक शब्दों के समूह या संकेत को भाषा कहते हैं। यह संकेत स्पष्ट होना चाहिए। मनुष्य के जटिल मनोभावों को भाषा व्यक्त करती है; किन्तु केवल संकेत ही भाषा नहीं हो पाती है।

SubQuestion No : 17**Q.17** निम्न में से भाषा शब्द संस्कृत के किस धातु से बना है ?

- Ans
- 1. वाणी
 - 2. भाष्
 - 3. भाखा
 - 4. बोली

Question ID : 4410091624902
Option 1 ID : 4410096418133
Option 2 ID : 4410096418132
Option 3 ID : 4410096418131
Option 4 ID : 4410096418134

Comprehension:

निम्नलिखित प्रश्नों के उत्तर दिए गए गद्यांश के आधार पर दीजिए।
भाषा शब्द संस्कृत के भाष् धातु से बना है। जिसका अर्थ है- बोलना। कक्षा में अध्यापक अपनी बात बोलकर समझाते हैं और छात्र सुनकर उस बात को समझते हैं। बच्चा माता-पिता से बोलकर अपने मन के भाव प्रकट करता है और वे उसकी बात सुनकर समझते हैं। इसी प्रकार, छात्र भी अध्यापक द्वारा समझायी गयी बात को लिखकर व्यक्त करते हैं और अध्यापक उसे पढ़कर मूल्यांकन करते हैं। भावों का आदान-प्रदान करने के लिए सभी प्राणियों द्वारा मन की भाषा का प्रयोग किया जाता है। पशु पक्षियों की बोलियों को भाषा नहीं कहा जाता। इसके द्वारा मनुष्य के भावों, विचारों और भावनाओं को व्यक्त किया जाता है। भाषा की परिभाषा देना कठिन कार्य है। भाषा वैज्ञानिकों ने इसकी अनेक परिभाषा दी हैं। किन्तु ये परिभाषाएं पूर्ण नहीं हैं। हर एक परिभाषा में कुछ न कुछ त्रुटि पायी जाती है। सार्थक शब्दों के समूह या संकेत को भाषा कहते हैं। यह संकेत स्पष्ट होना चाहिए। मनुष्य के जटिल मनोभावों को भाषा व्यक्त करती है; किन्तु केवल संकेत ही भाषा नहीं हो पाती है।

SubQuestion No : 18**Q.18 भाषा किसे कहते हैं?**

- Ans
- 1. शब्द के अर्थ को
 - 2. वाक्यों के समूह को
 - 3. सार्थक शब्दों के समूह को
 - 4. अर्थ की निष्पत्ति को

Question ID : 4410091624903

Option 1 ID : 4410096418136

Option 2 ID : 4410096418137

Option 3 ID : 4410096418135

Option 4 ID : 4410096418138

Comprehension:

निम्नलिखित प्रश्नों के उत्तर दिए गए गद्यांश के आधार पर दीजिए।
भाषा शब्द संस्कृत के भाष् धातु से बना है। जिसका अर्थ है- बोलना। कक्षा में अध्यापक अपनी बात बोलकर समझाते हैं और छात्र सुनकर उस बात को समझते हैं। बच्चा माता-पिता से बोलकर अपने मन के भाव प्रकट करता है और वे उसकी बात सुनकर समझते हैं। इसी प्रकार, छात्र भी अध्यापक द्वारा समझायी गयी बात को लिखकर व्यक्त करते हैं और अध्यापक उसे पढ़कर मूल्यांकन करते हैं। भावों का आदान-प्रदान करने के लिए सभी प्राणियों द्वारा मन की भाषा का प्रयोग किया जाता है। पशु पक्षियों की बोलियों को भाषा नहीं कहा जाता। इसके द्वारा मनुष्य के भावों, विचारों और भावनाओं को व्यक्त किया जाता है। भाषा की परिभाषा देना कठिन कार्य है। भाषा वैज्ञानिकों ने इसकी अनेक परिभाषा दी हैं। किन्तु ये परिभाषाएं पूर्ण नहीं हैं। हर एक परिभाषा में कुछ न कुछ त्रुटि पायी जाती है। सार्थक शब्दों के समूह या संकेत को भाषा कहते हैं। यह संकेत स्पष्ट होना चाहिए। मनुष्य के जटिल मनोभावों को भाषा व्यक्त करती है; किन्तु केवल संकेत ही भाषा नहीं हो पाती है।

SubQuestion No : 19**Q.19 निम्न में से गद्यांश में प्रयुक्त 'त्रुटि' का पर्यायवाची शब्द कौन-सा है ?**

- Ans
- 1. दुष्ट
 - 2. नूह
 - 3. चूक
 - 4. भूख

Question ID : 4410091624904

Option 1 ID : 4410096418142

Option 2 ID : 4410096418141

Option 3 ID : 4410096418139

Option 4 ID : 4410096418140

Comprehension:

निम्नलिखित प्रश्नों के उत्तर दिए गए गद्यांश के आधार पर दीजिए।
भाषा शब्द संस्कृत के भाष् धातु से बना है। जिसका अर्थ है- बोलना। कक्षा में अध्यापक अपनी बात बोलकर समझाते हैं और छात्र सुनकर उस बात को समझते हैं। बच्चा माता-पिता से बोलकर अपने मन के भाव प्रकट करता है और वे उसकी बात सुनकर समझते हैं। इसी प्रकार, छात्र भी अध्यापक द्वारा समझायी गयी बात को लिखकर व्यक्त करते हैं और अध्यापक उसे पढ़कर मूल्यांकन करते हैं। भावों का आदान-प्रदान करने के लिए सभी प्राणियों द्वारा मन की भाषा का प्रयोग किया जाता है। पशु पक्षियों की बोलियों को भाषा नहीं कहा जाता। इसके द्वारा मनुष्य के भावों, विचारों और भावनाओं को व्यक्त किया जाता है। भाषा की परिभाषा देना कठिन कार्य है। भाषा वैज्ञानिकों ने इसकी अनेक परिभाषा दी हैं। किन्तु ये परिभाषाएं पूर्ण नहीं हैं। हर एक परिभाषा में कुछ न कुछ त्रुटि पायी जाती है। सार्थक शब्दों के समूह या संकेत को भाषा कहते हैं। यह संकेत स्पष्ट होना चाहिए। मनुष्य के जटिल मनोभावों को भाषा व्यक्त करती है; किन्तु केवल संकेत ही भाषा नहीं हो पाती है।

SubQuestion No : 20**Q.20 निम्न में से गद्यांश में प्रयुक्त 'जटिल' शब्द का विलोम कौन-सा है ?**

- Ans
- 1. जंगम
 - 2. अछूत
 - 3. सरल
 - 4. चेतन

Question ID : 4410091624905

Option 1 ID : 4410096418143

Option 2 ID : 4410096418144

Option 3 ID : 4410096418145

Option 4 ID : 4410096418146

Section : Discipline1

Q.1 What is the primary aim of peace education as described in the context?

- Ans
- 1. To prioritize economic growth through vocational skill training.
 - 2. To focus on military strategies for national defense preparedness.
 - 3. To encourage competition among learners for academic excellence.
 - 4. To promote values and attitudes that lead to peaceful coexistence.

Question ID : 4410091636982

Option 1 ID : 4410096465763

Option 2 ID : 4410096465761

Option 3 ID : 4410096465762

Option 4 ID : 4410096465764

Q.2 In what way can education promote international understanding?

- Ans
- 1. By emphasizing only national achievements
 - 2. By ignoring global issues
 - 3. By teaching respect for cultural differences
 - 4. By discouraging foreign language learning

Question ID : 4410091640962

Option 1 ID : 4410096481021

Option 2 ID : 4410096481019

Option 3 ID : 4410096481020

Option 4 ID : 4410096481022

Q.3 According to Piaget, which stage is characterized by the development of object permanence?

- Ans
- 1. Formal operational stage
 - 2. Sensorimotor stage
 - 3. Preoperational stage
 - 4. Concrete operational stage

Question ID : 4410091645775
Option 1 ID : 4410096499629
Option 2 ID : 4410096499626
Option 3 ID : 4410096499627
Option 4 ID : 4410096499628

Q.4 Which stage of human development occurs before birth?

- Ans
- 1. Early childhood
 - 2. Late childhood
 - 3. Prenatal development
 - 4. Infancy

Question ID : 4410091676691
Option 1 ID : 4410096615332
Option 2 ID : 4410096615333
Option 3 ID : 4410096615331
Option 4 ID : 4410096615334

Q.5 Which amendment of the Indian Constitution introduced the Right to Free and Compulsory Education?

- Ans
- 1. 42nd Constitutional Amendment Act, 1976
 - 2. 86th Constitutional Amendment Act, 2002
 - 3. 73rd Constitutional Amendment Act, 1992
 - 4. 44th Constitutional Amendment Act, 1978

Question ID : 4410091626504
Option 1 ID : 4410096424388
Option 2 ID : 4410096424390
Option 3 ID : 4410096424391
Option 4 ID : 4410096424389

Q.6 What does Sociology of Education aim to provide, according to Ottaway?

- Ans
- 1. A philosophical framework for learning.
 - 2. A framework for studying education and society.
 - 3. A historical account of educational practices.
 - 4. A method for scientific experiments.

Question ID : 4410091651551
Option 1 ID : 4410096521978
Option 2 ID : 4410096521979
Option 3 ID : 4410096521981
Option 4 ID : 4410096521980

Q.7 Which of the following is NOT considered a principle of development?

- Ans**
- 1. Development is static in nature
 - 2. Development follows a typical pattern
 - 3. Development is a lifelong process
 - 4. Development is multidimensional

Question ID : **4410091570124**
Option 1 ID : **4410096201499**
Option 2 ID : **4410096201498**
Option 3 ID : **4410096201497**
Option 4 ID : **4410096201500**

Q.8 A district ensures every child attends school regularly with no dropouts. Which UEE goal under RTE is this?

- Ans**
- 1. Universal access and retention
 - 2. Curriculum expansion
 - 3. Teacher promotion
 - 4. Digital literacy

Question ID : **4410091568287**
Option 1 ID : **4410096194433**
Option 2 ID : **4410096194432**
Option 3 ID : **4410096194434**
Option 4 ID : **4410096194435**

Q.9 The insistence of the Radhakrishnan Commission on incorporating religious and moral education in schools was based on the principle that educational institutions should:

- Ans**
- 1. Enforce ritual practices of different faiths
 - 2. Build ethical character without sectarian influence
 - 3. Replace academic subjects with moral science
 - 4. Promote a single national religion

Question ID : **4410091543112**
Option 1 ID : **4410096095489**
Option 2 ID : **4410096095490**
Option 3 ID : **4410096095491**
Option 4 ID : **4410096095488**

Q.10 When constructing a curriculum for a diverse classroom in India, which factor is most important to ensure inclusivity and relevance?

- Ans
- 1. Strict adherence to a single national language
 - 2. Emphasis on rote memorization of common language
 - 3. Representation of multiple cultures and languages
 - 4. Exclusive focus on urban and rural issues

Question ID : 4410091678838
Option 1 ID : 4410096623562
Option 2 ID : 4410096623563
Option 3 ID : 4410096623561
Option 4 ID : 4410096623564

Q.11 Which factor is most likely to influence a child's personality development during early childhood?

- Ans
- 1. Left-handedness
 - 2. Season of birth
 - 3. Favorite color
 - 4. Parental behavior

Question ID : 4410091622545
Option 1 ID : 4410096408958
Option 2 ID : 4410096408957
Option 3 ID : 4410096408959
Option 4 ID : 4410096408956

Q.12 Why is the study of sociology important for teachers?

- Ans
- 1. It helps understand students' social backgrounds.
 - 2. It teaches only basic classroom management.
 - 3. It replaces all major educational theories.
 - 4. It focuses mainly on government policy issues.

Question ID : 4410091693097
Option 1 ID : 4410096678430
Option 2 ID : 4410096678432
Option 3 ID : 4410096678429
Option 4 ID : 4410096678431

Q.13 The caste system is best defined as:

- Ans
- 1. An endogamous hierarchy of status groups
 - 2. A set of voluntary professional unions
 - 3. A temporary social classification
 - 4. A political alliance of groups

Question ID : 4410091570557
Option 1 ID : 4410096203202
Option 2 ID : 4410096203201
Option 3 ID : 4410096209516
Option 4 ID : 4410096203200

Q.14 A child repeatedly fails and is forced to repeat the same class during elementary education. Which provision of the RTE Act is applicable in this case?

- Ans**
- 1. Prohibition of detention
 - 2. Continuous assessment
 - 3. School recognition
 - 4. Curriculum flexibility

Question ID : 4410091631463
Option 1 ID : 4410096444066
Option 2 ID : 4410096444065
Option 3 ID : 4410096444064
Option 4 ID : 4410096444067

Q.15 How do psychologists primarily define personality?

- Ans**
- 1. As physical appearance
 - 2. As a person's hobbies and interests
 - 3. As a characteristic pattern of thinking, feeling, and acting
 - 4. As social status

Question ID : 4410091601450
Option 1 ID : 4410096325423
Option 2 ID : 4410096325424
Option 3 ID : 4410096325422
Option 4 ID : 4410096325425

Q.16 Which activity best illustrates the development of fine motor skills in early childhood?

- Ans**
- 1. Jumping over a small hurdle
 - 2. Climbing up stairs
 - 3. Running across the playground
 - 4. Stringing beads onto a thread

Question ID : 4410091630105
Option 1 ID : 4410096438527
Option 2 ID : 4410096438528
Option 3 ID : 4410096438529
Option 4 ID : 4410096438526

Q.17 Which factor is most directly related to the development of a child's personality?

- Ans
- 1. Mathematical ability
 - 2. Favorite color
 - 3. Height and weight
 - 4. Family environment

Question ID : 4410091607429
Option 1 ID : 4410096348689
Option 2 ID : 4410096348691
Option 3 ID : 4410096348688
Option 4 ID : 4410096348690

Q.18 If a child encounters a completely new food and cannot connect it with their existing schema, what state do they experience?

- Ans
- 1. Assimilation
 - 2. Disequilibrium
 - 3. Organization
 - 4. Adaptation

Question ID : 4410091601488
Option 1 ID : 4410096325552
Option 2 ID : 4410096325550
Option 3 ID : 4410096325553
Option 4 ID : 4410096325551

Q.19 What essential element does social equality require to ensure fairness in competition for social goods?

- Ans
- 1. Equality of opportunity
 - 2. Economic redistribution
 - 3. Political representation
 - 4. Legal equality

Question ID : 4410091651129
Option 1 ID : 4410096520626
Option 2 ID : 4410096520628
Option 3 ID : 4410096520629
Option 4 ID : 4410096520627

Q.20 Who was appointed as the Chairman of the University Education Commission set up in 1948-49 in India?

- Ans**
- 1. Dr. D.S. Kothari
 - 2. Dr. Zakir Hussain
 - 3. Dr. A. Lakshmanaswami Mudaliar
 - 4. Dr. S. Radhakrishnan

Question ID : 4410091604749
Option 1 ID : 4410096338163
Option 2 ID : 4410096338161
Option 3 ID : 4410096338162
Option 4 ID : 4410096338160

Section : Discipline2

Q.1 A teacher takes students outside to observe shadows at different times of the day and record their findings. Which aspect of experiential learning is reflected here?

- Ans**
- 1. Learning by memorising shadow definitions
 - 2. Learning only through textbook diagrams
 - 3. Learning through lecture notes alone
 - 4. Learning through direct experience and reflection

Question ID : 4410091546820
Option 1 ID : 4410096110150
Option 2 ID : 4410096110149
Option 3 ID : 4410096110151
Option 4 ID : 4410096110148

Q.2 What is a primary benefit of viewing films with social and educational content?

- Ans**
- 1. It distracts learners from self-awareness and critical reflection.
 - 2. It limits understanding by focusing only on fictional experiences.
 - 3. It encourages reflection on values, attitudes, and personal behavior.
 - 4. It mainly provides entertainment without influencing personal thinking.

Question ID : 4410091610812
Option 1 ID : 4410096362117
Option 2 ID : 4410096362118
Option 3 ID : 4410096362115
Option 4 ID : 4410096362116

Q.3 What is a primary objective of teaching mathematics at the elementary stage according to educational goals that emphasize foundational skills?

- Ans**
- 1. To ensure students memorize complex mathematical formulas and equations early on without contextual understanding
 - 2. To help learners develop fundamental arithmetic skills such as addition, subtraction, multiplication, and division efficiently
 - 3. To focus exclusively on geometry and spatial reasoning while postponing numerical operations for later grades
 - 4. To train students to use advanced technology tools as the main approach for mathematical problem-solving

Question ID : 4410091560874

Option 1 ID : 4410096165698

Option 2 ID : 4410096165699

Option 3 ID : 4410096165700

Option 4 ID : 4410096165701

Q.4 A mindfulness exercise invites students to slowly eat a raisin while paying attention to its texture, taste, and smell. This approach primarily introduces:

- Ans**
- 1. Nutritional evaluation of food ingredients for sensory awareness
 - 2. Rapid eating to increase the efficiency of sensory organs
 - 3. Routine-based eating habits and behaviour patterns
 - 4. Mindful sensory awareness and present-moment attention

Question ID : 4410091543226

Option 1 ID : 4410096095945

Option 2 ID : 4410096095946

Option 3 ID : 4410096095947

Option 4 ID : 4410096095944

Q.5 What is a primary benefit of learning to observe oneself?

- Ans**
- 1. Avoiding self-reflection
 - 2. Making self-improvement.
 - 3. Observing others' patterns
 - 4. Suppressing emotions

Question ID : 4410091690994

Option 1 ID : 4410096670184

Option 2 ID : 4410096670183

Option 3 ID : 4410096670182

Option 4 ID : 4410096670185

Q.6 Which principle of teaching emphasizes starting instruction from what is already familiar to the learner?

- Ans**
- 1. Ensuring active participation through hands-on learning activities daily.
 - 2. Proceeding from known to unknown for building new knowledge effectively.
 - 3. Accommodating individual differences in abilities and learning paces.
 - 4. Establishing correlations between subjects for integrated understanding.

Question ID : 4410091637351
Option 1 ID : 4410096466943
Option 2 ID : 4410096466942
Option 3 ID : 4410096466944
Option 4 ID : 4410096466945

Q.7 A researcher is comparing the influence of family and student councils on learners' values. Which distinction between social groups is most relevant for understanding the nature of these influences?

- Ans**
- 1. Statics and dynamics
 - 2. Formal and informal sanctions
 - 3. Primary and secondary groups
 - 4. Role and status

Question ID : 4410091613179
Option 1 ID : 4410096371553
Option 2 ID : 4410096371552
Option 3 ID : 4410096371551
Option 4 ID : 4410096371550

Q.8 An educator designs a lesson plan that emphasizes equitable participation, considers students' varied learning needs, and adapts resources for all learners. Which aim of pedagogy across the curriculum is best represented here?

- Ans**
- 1. Focusing solely on content delivery
 - 2. Encouraging individual competition
 - 3. Promoting equity and inclusive instruction
 - 4. Prioritizing uniform teaching methods

Question ID : 4410091606256
Option 1 ID : 4410096344049
Option 2 ID : 4410096344050
Option 3 ID : 4410096344048
Option 4 ID : 4410096344051

Q.9 What should a graduate student prioritize when journal writing for self-understanding?

- Ans**
- 1. Focusing on others' issues
 - 2. Creating fictional stories
 - 3. Honest expression of thoughts
 - 4. Writing for entertainment

Question ID : 4410091607838
Option 1 ID : 4410096350302
Option 2 ID : 4410096350303
Option 3 ID : 4410096350300
Option 4 ID : 4410096350301

Q.10 A curriculum designer is creating early literacy materials for a linguistically diverse district. Which approach best supports inclusive education and national integration according to the scope of multilingualism?

- Ans**
- 1. Developing resources in multiple home and school languages
 - 2. Designing resources only in the regional official language
 - 3. Focusing solely on English for global competitiveness
 - 4. Using only visual aids to avoid language issues

Question ID : 4410091683447
Option 1 ID : 4410096640715
Option 2 ID : 4410096640714
Option 3 ID : 4410096640716
Option 4 ID : 4410096640717

Q.11 Which classroom practice best utilizes literature to enhance both comprehension and communication skills among early learners?

- Ans**
- 1. Asking students to copy passages
 - 2. Assigning only factual questions
 - 3. Engaging students in group discussions about stories
 - 4. Having students silently read without interaction

Question ID : 4410091608533
Option 1 ID : 4410096353045
Option 2 ID : 4410096353047
Option 3 ID : 4410096353044
Option 4 ID : 4410096353046

Q.12 Which of the following best captures the overall essence of what language is?

- Ans**
- 1. A structured system used for communication and cultural interaction.
 - 2. A purely instinctive system of sounds used by humans and animals alike.
 - 3. A set of rigid rules that determine how all humans must communicate.
 - 4. A fixed collection of words whose meanings do not change over time.

Question ID : 4410091576586
Option 1 ID : 4410096227157
Option 2 ID : 4410096227156
Option 3 ID : 4410096227155
Option 4 ID : 4410096227158

Q.13 Which statement most accurately reflects the scope of multilingualism in early literacy development?

- Ans**
- 1. Multilingualism is limited to classroom interactions with foreign languages.
 - 2. Multilingualism refers only to the use of regional dialects at home.
 - 3. Multilingualism is the ability to use and understand more than one language.
 - 4. Multilingualism involves learning new vocabulary in one language only.

Question ID : 4410091631456
Option 1 ID : 4410096444042
Option 2 ID : 4410096444041
Option 3 ID : 4410096444040
Option 4 ID : 4410096444043

Q.14 Which scenario best illustrates an issue about multilingualism in families?

- Ans**
- 1. Grandchildren and grandparents not understanding each other due to speaking different languages
 - 2. Parents teaching only one language at home
 - 3. Siblings learning the same new language at school
 - 4. All family members speaking the same language fluently

Question ID : 4410091612012
Option 1 ID : 4410096366872
Option 2 ID : 4410096366874
Option 3 ID : 4410096366873
Option 4 ID : 4410096366871

Q.15 Experiential learning is closely aligned with _____.

- Ans**
- 1. Purely transmission-based instruction
 - 2. Rote-based drill learning
 - 3. Constructivist learning theory
 - 4. Strict behaviourist conditioning

Question ID : 4410091578541
Option 1 ID : 4410096235249
Option 2 ID : 4410096235251
Option 3 ID : 4410096235250
Option 4 ID : 4410096235248

Q.16 How does a reflective journal help students grow over time?

- Ans**
- 1. By memorizing facts and textbook content
 - 2. By promoting personal growth and perspective change
 - 3. By completing homework more quickly daily
 - 4. By repeating lessons without personal analysis

Question ID : **4410091610494**
Option 1 ID : **4410096360860**
Option 2 ID : **4410096360859**
Option 3 ID : **4410096360861**
Option 4 ID : **4410096360862**

Q.17 During a group exercise, members begin to divide tasks based on their strengths, but disagreements about role assignments occasionally disrupt progress. What is the most likely pattern of behavior being exhibited by this group?

- Ans**
- 1. Role negotiation leading to temporary conflict
 - 2. Members refusing all assigned roles
 - 3. Complete harmony and agreement at all times
 - 4. Static roles with no negotiation

Question ID : **4410091622787**
Option 1 ID : **4410096409920**
Option 2 ID : **4410096409923**
Option 3 ID : **4410096409922**
Option 4 ID : **4410096409921**

Q.18 How can literature foster creativity in language learning?

- Ans**
- 1. By focusing on memorizing factual information.
 - 2. By having students repeat sentences.
 - 3. By inspiring students to write their own stories.
 - 4. By correcting students' grammar mistakes.

Question ID : **4410091694769**
Option 1 ID : **4410096685151**
Option 2 ID : **4410096685150**
Option 3 ID : **4410096685149**
Option 4 ID : **4410096685152**

Q.19 When students discuss an experiment in pairs and share their findings with the class, what classroom function of language is being demonstrated?

- Ans
- 1. Only a way to memorize content
 - 2. A tool for communication and sharing ideas
 - 3. A method to avoid interaction
 - 4. A tool for silent reading only

Question ID : 4410091547773
Option 1 ID : 4410096113932
Option 2 ID : 4410096113931
Option 3 ID : 4410096113933
Option 4 ID : 4410096113934

Q.20 A teacher encourages students to mediate peer conflicts using consensus-building exercises inspired by Gandhian values. What principle of peace education is most evident in this instructional approach?

- Ans
- 1. Fostering conflict resolution and consensus
 - 2. Promoting rote memorization
 - 3. Reinforcing hierarchical classroom norms
 - 4. Prioritizing individual achievement

Question ID : 4410091683136
Option 1 ID : 4410096639638
Option 2 ID : 4410096639639
Option 3 ID : 4410096639641
Option 4 ID : 4410096639640

Section : Discipline3

Q.1 A teacher ensures fair treatment and equal participation opportunities for all students. This action reflects which professional principle?

- Ans
- 1. Classroom authority in managing student behavior
 - 2. Ethical responsibility toward students and fairness
 - 3. Strict adherence to syllabus completion timelines
 - 4. Emphasis on exam results and academic ranking

Question ID : 4410091695713
Option 1 ID : 4410096688849
Option 2 ID : 4410096688850
Option 3 ID : 4410096688851
Option 4 ID : 4410096688852

Q.2 What is a common role of an NGO in supporting schools?

- Ans**
- 1. Organizing parent-teacher meetings
 - 2. Managing school discipline
 - 3. Setting the school curriculum
 - 4. Providing educational resources and support

Question ID : **4410091619514**
Option 1 ID : **4410096396913**
Option 2 ID : **4410096396914**
Option 3 ID : **4410096396915**
Option 4 ID : **4410096396912**

Q.3 In Vaillant's hierarchy of defenses, which classroom behavior best exemplifies a mature defense that enhances learning while managing anxiety about performance?

- Ans**
- 1. A student who procrastinates before an exam and blames the teacher's "trick questions" after scoring poorly
 - 2. A student who channels pre-exam anxiety into organizing a peer review session and reworking practice problems
 - 3. A student who avoids presentations by frequently calling in sick on speaking days
 - 4. A student who insists the grading rubric is unfair and argues for points without reviewing the feedback

Question ID : **4410091563125**
Option 1 ID : **4410096174066**
Option 2 ID : **4410096174065**
Option 3 ID : **4410096174063**
Option 4 ID : **4410096174064**

Q.4 What is the primary effect of television advertising on children?

- Ans**
- 1. Improves academic performance
 - 2. Encourages outdoor play
 - 3. Influences buying behavior
 - 4. Reduces creativity

Question ID : **4410091631408**
Option 1 ID : **4410096443849**
Option 2 ID : **4410096443851**
Option 3 ID : **4410096443848**
Option 4 ID : **4410096443850**

Q.5 During the preoperational stage, what is a common limitation in a child's thinking?

- Ans
- 1. Logical reasoning
 - 2. Egocentrism
 - 3. Problem solving
 - 4. Multiple reasoning

Question ID : 4410091682322
Option 1 ID : 4410096636562
Option 2 ID : 4410096636564
Option 3 ID : 4410096636565
Option 4 ID : 4410096636563

Q.6 Which of the following sentences is grammatically correct?

- Ans
- 1. She do not like to attend meetings regularly.
 - 2. She does not like to attend meetings regularly.
 - 3. She does not likes to attend meetings regularly.
 - 4. She did not likes to attend meetings regularly.

Question ID : 4410091610682
Option 1 ID : 4410096361607
Option 2 ID : 4410096361608
Option 3 ID : 4410096361610
Option 4 ID : 4410096361609

Q.7 Which concept explains the preference for sons in some Indian communities?

- Ans
- 1. Economic modernization
 - 2. Gender neutrality
 - 3. Patriarchy
 - 4. Matrilineal descent

Question ID : 4410091580922
Option 1 ID : 4410096245045
Option 2 ID : 4410096245044
Option 3 ID : 4410096245043
Option 4 ID : 4410096245042

Q.8 Which of the following is not a characteristic of an educator?

- Ans
- 1. Involves a teaching profession
 - 2. Performs a social service
 - 3. Low degree of autonomy
 - 4. Common code of conduct

Question ID : 4410091546958
Option 1 ID : 4410096110701
Option 2 ID : 4410096110700
Option 3 ID : 4410096110702
Option 4 ID : 4410096110703

Q.9 A teacher who notices a student's unspoken anxiety and responds appropriately is showing:

- Ans**
- 1. Competitiveness
 - 2. Creativity
 - 3. Empathy
 - 4. Discipline

Question ID : 4410091572423
Option 1 ID : 4410096210645
Option 2 ID : 4410096210644
Option 3 ID : 4410096210647
Option 4 ID : 4410096210646

Q.10 From the perspective of grammatical correctness, subject-verb agreement requires that:

- Ans**
- 1. The verb matches the subject in number
 - 2. The verb adapts to the discourse context
 - 3. The verb reflects the speaker's intention
 - 4. The verb aligns with pragmatic meaning

Question ID : 4410091580768
Option 1 ID : 4410096244404
Option 2 ID : 4410096244403
Option 3 ID : 4410096244402
Option 4 ID : 4410096244405

Q.11 During a classroom observation, a teacher notes that children aged 3-4 are playing side-by-side with clay, occasionally exchanging tools and commenting on each other's work, but without a unified goal. What type of social play best describes their interaction?

- Ans**
- 1. Parallel play with minimal interaction
 - 2. Solitary play with independent focus
 - 3. Associative play with shared materials
 - 4. Cooperative play with assigned roles

Question ID : 4410091615706
Option 1 ID : 4410096381748
Option 2 ID : 4410096381745
Option 3 ID : 4410096381746
Option 4 ID : 4410096381747

Q.12 Which of the following assessment tasks would best evaluate students' ability to apply the concept of area in a real-life context?

- Ans
- 1. Reciting the formula for area of a rectangle from memory
 - 2. Designing a plan to cover a classroom floor with carpet tiles
 - 3. Listing different units used for measuring area
 - 4. Copying a diagram of a square onto grid paper

Question ID : 4410091641691
Option 1 ID : 4410096483844
Option 2 ID : 4410096483843
Option 3 ID : 4410096483846
Option 4 ID : 4410096483845

Q.13 Children cover a sheet of paper with different leaves and count them. Which mathematical ideas are best connected through this activity?

- Ans
- 1. Measurement and data handling
 - 2. Seriation and conservation
 - 3. Volume and proportionality
 - 4. Estimation and circumference

Question ID : 4410091558700
Option 1 ID : 4410096157190
Option 2 ID : 4410096157192
Option 3 ID : 4410096157193
Option 4 ID : 4410096157191

Q.14 Children pretend to run a shop during free play. This is an example of:

- Ans
- 1. Solitary play
 - 2. Constructive play
 - 3. Symbolic/pretend play
 - 4. Physical play

Question ID : 4410091568381
Option 1 ID : 4410096194808
Option 2 ID : 4410096194809
Option 3 ID : 4410096194810
Option 4 ID : 4410096194811

Q.15 A student shares a personal problem that affects learning. What should a teacher do to act as a facilitator while staying professional?

- Ans
- 1. Solve every part of the student's personal problem
 - 2. Ignore the concern and focus only on schoolwork
 - 3. Tell the class to help solve the student's problem
 - 4. Listen kindly and guide the student to proper help

Question ID : 4410091603931
Option 1 ID : 4410096334913
Option 2 ID : 4410096334914
Option 3 ID : 4410096334915
Option 4 ID : 4410096334912

Q.16 A school invites parents to participate in decision-making about student welfare and school activities through regular meetings. This practice best reflects the role of which of the following?

- Ans**
- 1. Inspection committees
 - 2. Parent Teacher Association
 - 3. Examination boards
 - 4. Private coaching agencies

Question ID : 441009168525
Option 1 ID : 4410096648994
Option 2 ID : 4410096648995
Option 3 ID : 4410096648997
Option 4 ID : 4410096648996

Q.17 Which sentence correctly uses subject-verb agreement?

- Ans**
- 1. The team is play very well in the match.
 - 2. The team plays very well in the match.
 - 3. The team play very well in the match.
 - 4. The team playing very well in the match.

Question ID : 4410091548280
Option 1 ID : 4410096115836
Option 2 ID : 4410096115834
Option 3 ID : 4410096115833
Option 4 ID : 4410096115835

Q.18 A media studies class is asked to compare commercial ads for junk food with social advertisements about child rights. Which key difference should students focus on to understand their broader societal impact?

- Ans**
- 1. Social ads are usually longer in duration
 - 2. Commercial ads favor wealth, social ads promote equity
 - 3. Junk food ads are banned in urban areas
 - 4. Social ads use more celebrities than commercial ads

Question ID : 4410091616435
Option 1 ID : 4410096384665
Option 2 ID : 4410096384662
Option 3 ID : 4410096384664
Option 4 ID : 4410096384663

Q.19 A teacher asks students to estimate the number of books needed to cover a desktop, then verifies it by laying the books down. This activity primarily aids the child in developing the foundational idea of:

- Ans**
- 1. Standardized capacity
 - 2. Tiling unit area
 - 3. Volume comparison
 - 4. Linear comparison

Question ID : **4410091558411**
Option 1 ID : **4410096156048**
Option 2 ID : **4410096156046**
Option 3 ID : **4410096156045**
Option 4 ID : **4410096156047**

Q.20 How does mastering English language skills benefit someone aiming for a global career?

- Ans**
- 1. It focuses only on local markets
 - 2. It enables effective communication and access to international opportunities
 - 3. It replaces the need for technical skills
 - 4. It guarantees immediate promotion in all jobs

Question ID : **4410091612193**
Option 1 ID : **4410096367618**
Option 2 ID : **4410096367615**
Option 3 ID : **4410096367617**
Option 4 ID : **4410096367616**

Section : **Discipline4**

Q.1 A teacher asks students to design a model of a simple water purification system using discarded plastic bottles and sand. Which principle does this activity exemplify?

- Ans**
- 1. Demonstrating established scientific facts in classrooms
 - 2. Application of scientific concepts using low cost materials
 - 3. Demonstrating laboratory experiments only with expensive kits
 - 4. Implementing discovery-oriented tasks as field-work

Question ID : **4410091646412**
Option 1 ID : **4410096501888**
Option 2 ID : **4410096501886**
Option 3 ID : **4410096501887**
Option 4 ID : **4410096501889**

Q.2 How does education help vulnerable populations?

- Ans**
- 1. By increasing competition among individuals
 - 2. By promoting physical activities only
 - 3. By reducing poverty and creating better perspectives
 - 4. By eliminating all social conflicts

Question ID : 4410091605098

Option 1 ID : 4410096339555

Option 2 ID : 4410096339557

Option 3 ID : 4410096339554

Option 4 ID : 4410096339556

Q.3 A teacher asks students, "How can we reduce waste in our school?" and accepts multiple reasonable answers. This question is an example of which of the following?

- Ans**
- 1. Drill-based assessment
 - 2. Objective-type testing
 - 3. Open-ended evaluation
 - 4. Memorisation testing

Question ID : 4410091690406

Option 1 ID : 4410096667823

Option 2 ID : 4410096667821

Option 3 ID : 4410096667822

Option 4 ID : 4410096667824

Q.4 Which ICT tool best supports collaborative story writing in a primary English class?

- Ans**
- 1. Interactive whiteboard
 - 2. WhatsApp
 - 3. Google Docs
 - 4. YouTube

Question ID : 4410091635493

Option 1 ID : 4410096459993

Option 2 ID : 4410096459992

Option 3 ID : 4410096459991

Option 4 ID : 4410096459994

Q.5 A principal wants to improve student engagement and achievement by applying pedagogical leadership. Which action aligns best with this goal?

- Ans
- 1. Emphasizing strict discipline
 - 2. Promoting reflective teaching
 - 3. Using fixed lesson plans
 - 4. Increasing teacher oversight

Question ID : 4410091623872
Option 1 ID : 4410096414070
Option 2 ID : 4410096414069
Option 3 ID : 4410096414071
Option 4 ID : 4410096414068

Q.6 When evaluating the effectiveness of low cost-no cost teaching-learning materials in environmental studies, which criterion is most important to ensure meaningful learning outcomes for diverse learners?

- Ans
- 1. The materials are used only by teachers for classroom demonstration
 - 2. The materials are sourced exclusively from outside the community
 - 3. The materials adapt to learner needs and encourage active participation
 - 4. The materials are aesthetically pleasing and visually attractive

Question ID : 4410091681827
Option 1 ID : 4410096634681
Option 2 ID : 4410096634680
Option 3 ID : 4410096634679
Option 4 ID : 4410096634678

Q.7 Which process is developed in children through interaction with the environment?

- Ans
- 1. Observation, recording, classification, communication
 - 2. Sitting silently without exploring
 - 3. Ignoring natural surroundings and objects
 - 4. Copying and memorizing from the board

Question ID : 4410091572453
Option 1 ID : 4410096210748
Option 2 ID : 4410096210750
Option 3 ID : 4410096210751
Option 4 ID : 4410096210749

Q.8 What is a demerit of the GMT method?

- Ans**
- 1. It requires advanced technology.
 - 2. It restricts speaking and listening skills.
 - 3. It is not suitable for large classes.
 - 4. It is expensive to implement.

Question ID : **4410091608477**
Option 1 ID : **4410096352822**
Option 2 ID : **4410096352821**
Option 3 ID : **4410096352823**
Option 4 ID : **4410096352820**

Q.9 The functional approach to Instructional Leadership explicitly includes defining which institutional component?

- Ans**
- 1. Staffing reorganization
 - 2. Annual procurement plan
 - 3. External partnership goals
 - 4. Clear school mission

Question ID : **4410091558788**
Option 1 ID : **4410096157539**
Option 2 ID : **4410096157537**
Option 3 ID : **4410096157540**
Option 4 ID : **4410096157538**

Q.10 Quality textbooks facilitate effective learning by integrating what essential pedagogical feature?

- Ans**
- 1. Uniform presentation ignoring curriculum alignment
 - 2. Resource ideas with instructional activities rationale
 - 3. Static content without teaching strategy links
 - 4. Assessment tools excluding formative practice

Question ID : **4410091564503**
Option 1 ID : **4410096179591**
Option 2 ID : **4410096179589**
Option 3 ID : **4410096179590**
Option 4 ID : **4410096179592**

Q.11 When assessing a student's writing, which of the following aspects is MOST important?

- Ans**
- 1. The type of pen used
 - 2. Grammar, creativity, and clarity of ideas
 - 3. Only the length of the writing
 - 4. Copying from textbooks

Question ID : **4410091553481**
Option 1 ID : **4410096136597**
Option 2 ID : **4410096136596**
Option 3 ID : **4410096136595**
Option 4 ID : **4410096136598**

Q.12 In the context of lesson planning, which step involves checking students' prior knowledge before introducing new content?

- Ans
- 1. Evaluation
 - 2. Preparation
 - 3. Presentation
 - 4. Practice

Question ID : 4410091638427
Option 1 ID : 4410096471425
Option 2 ID : 4410096471422
Option 3 ID : 4410096471423
Option 4 ID : 4410096471424

Q.13 The scope of social science is described as vast because:

- Ans
- 1. It avoids analysis of facts and figures
 - 2. It focuses mainly on mathematical data
 - 3. It includes multiple disciplines and social situations
 - 4. It deals only with ancient civilizations

Question ID : 4410091572475
Option 1 ID : 4410096210831
Option 2 ID : 4410096210830
Option 3 ID : 4410096210829
Option 4 ID : 4410096210828

Q.14 Which statement best captures the relationship between equality and justice?

- Ans
- 1. Equality replaces the need for justice in society
 - 2. Justice gives meaning to equality by ensuring fairness in practice
 - 3. Justice requires treating everyone exactly the same
 - 4. Equality and justice are unrelated concepts in democratic systems

Question ID : 4410091603091
Option 1 ID : 4410096331563
Option 2 ID : 4410096331560
Option 3 ID : 4410096331562
Option 4 ID : 4410096331561

Q.15 Which of the following is a major theme in the EVS curriculum at the primary level?

- Ans
- 1. Basics of quantum physics concepts
 - 2. Ideas from advanced calculus study
 - 3. Rules guiding international trade
 - 4. Topics on families, nature, and health

Question ID : 4410091552862
Option 1 ID : 4410096133840
Option 2 ID : 4410096133842
Option 3 ID : 4410096133843
Option 4 ID : 4410096133841

Q.16 Which primary skill does the Grammar Translation Method focus on developing?

- Ans**
- 1. Listening practice
 - 2. Interactive speaking
 - 3. Reading comprehension
 - 4. Oral communication

Question ID : 4410091637837
Option 1 ID : 4410096468912
Option 2 ID : 4410096468913
Option 3 ID : 4410096468910
Option 4 ID : 4410096468911

Q.17 Which languages were primarily taught using the Grammar Translation method during its early years?

- Ans**
- 1. French and Spanish
 - 2. Chinese and Japanese
 - 3. Greek and Latin
 - 4. English and German

Question ID : 4410091636361
Option 1 ID : 4410096463350
Option 2 ID : 4410096463352
Option 3 ID : 4410096463349
Option 4 ID : 4410096463351

Q.18 A central problem of globalization in education is that it can:

- Ans**
- 1. Reduce the need for technology skills in learning
 - 2. Give equal learning opportunities to everyone
 - 3. Make cultures look similar and increase digital inequality
 - 4. Strengthen local culture without any outside effect

Question ID : 4410091548536
Option 1 ID : 4410096116842
Option 2 ID : 4410096116840
Option 3 ID : 4410096116841
Option 4 ID : 4410096116843

Q.19 A school leader aiming to drive effective change in teaching and learning should primarily focus on which approach?

- Ans
- 1. Implementing changes without staff consultation
 - 2. Relying only on external experts for advice
 - 3. Mandating uniform teaching methods across all subjects
 - 4. Shared instructional decision-making with teachers

Question ID : 4410091611121
Option 1 ID : 4410096363340
Option 2 ID : 4410096363341
Option 3 ID : 4410096363342
Option 4 ID : 4410096363339

Q.20 A teacher is designing homework based on textbook exercises for an optional pedagogic course. To promote transfer of learning, what should she ensure?

- Ans
- 1. She links homework tasks to real-life situations, such as family journals.
 - 2. She repeats classroom exercises as homework without variation.
 - 3. She limits homework to textbook reading only.
 - 4. She assigns only textbook questions without context.

Question ID : 4410091609048
Option 1 ID : 4410096355108
Option 2 ID : 4410096355110
Option 3 ID : 4410096355111
Option 4 ID : 4410096355109

Section : Discipline5

Q.1 A teacher designs tasks that develop thinking, emotional understanding, and hand-eye coordination. This demonstrates:

- Ans
- 1. Organizational skills training
 - 2. Bloom's three learning domains
 - 3. Aesthetic appreciation activities
 - 4. A focus on memorization

Question ID : 4410091570207
Option 1 ID : 4410096201824
Option 2 ID : 4410096201822
Option 3 ID : 4410096201823
Option 4 ID : 4410096201821

Q.2 A student receives individualised pull-out sessions, uses manipulatives like an abacus, and is provided with extra time for tasks. Which combination of needs is most likely being addressed?

- Ans**
- 1. Dysgraphia and peer support
 - 2. Dyslexia and large print texts
 - 3. Auditory processing and speech therapy
 - 4. Dyscalculia and classroom adaptation

Question ID : **4410091612000**
Option 1 ID : **4410096366823**
Option 2 ID : **4410096366826**
Option 3 ID : **4410096366825**
Option 4 ID : **4410096366824**

Q.3 A school aims to promote a more gender-inclusive learning environment. Which initiative would be most effective?

- Ans**
- 1. Addressing inclusion only during special awareness events
 - 2. Maintaining traditional gender roles in school activities
 - 3. Highlighting achievement examples from one gender group
 - 4. Reviewing learning materials to eliminate gender stereotypes

Question ID : **4410091618970**
Option 1 ID : **4410096394755**
Option 2 ID : **4410096394753**
Option 3 ID : **4410096394754**
Option 4 ID : **4410096394752**

Q.4 Children from marginalized families face classroom neglect despite strong performance primarily due to which combined factors?

- Ans**
- 1. Teacher prejudice and peer insensitivity to diversity contexts
 - 2. Advanced digital resources and integration of technology excluding rural participants only
 - 3. The provisions of RTE Act systematically denies access to education
 - 4. Uniform curriculum and syllabus design ignoring socioeconomic gradients

Question ID : **4410091564682**
Option 1 ID : **4410096180305**
Option 2 ID : **4410096180306**
Option 3 ID : **4410096180304**
Option 4 ID : **4410096180307**

Q.5 Charts, maps and diagrams belong to which category of teaching aids?

- Ans**
- 1. Audio-visual aids
 - 2. Visual aids
 - 3. Audio aids
 - 4. Activity aids

Question ID : 4410091572485
Option 1 ID : 4410096210869
Option 2 ID : 4410096210871
Option 3 ID : 4410096210868
Option 4 ID : 4410096210870

Q.6 A teacher asks students to explain the difference between formative and summative assessment. This question mainly evaluates which cognitive skill level according to Bloom's taxonomy?

- Ans**
- 1. Understanding
 - 2. Creating
 - 3. Remembering
 - 4. Applying

Question ID : 4410091669664
Option 1 ID : 4410096589541
Option 2 ID : 4410096589543
Option 3 ID : 4410096589540
Option 4 ID : 4410096589542

Q.7 How can a teacher make classroom materials more inclusive for students from different backgrounds?

- Ans**
- 1. Using only prescribed English textbooks
 - 2. Choosing content from a state curriculum
 - 3. Incorporating examples from various cultures
 - 4. Avoiding the use of local examples in classroom

Question ID : 4410091670630
Option 1 ID : 4410096593280
Option 2 ID : 4410096593281
Option 3 ID : 4410096593283
Option 4 ID : 4410096593282

Q.8 How can textbooks influence gender socialisation?

- Ans**
- 1. By portraying traditional or diverse gender roles
 - 2. By mandating extracurricular participation for students
 - 3. By controlling teacher behaviours in classrooms
 - 4. By assigning grades based on gender differences

Question ID : 4410091572503
Option 1 ID : 4410096210943
Option 2 ID : 4410096210940
Option 3 ID : 4410096210941
Option 4 ID : 4410096210942

Q.9 When teachers discourage boys from expressing emotions while permitting girls to do so, this pattern of interaction reinforces:

- Ans
- 1. Independent academic functioning
 - 2. Gender-neutral classroom behaviour
 - 3. Traditional gender norms
 - 4. Positive emotional growth

Question ID : 4410091550587
Option 1 ID : 4410096124810
Option 2 ID : 4410096124809
Option 3 ID : 4410096124808
Option 4 ID : 4410096124807

Q.10 Mathematics is most precisely defined as the science of which of the following?

- Ans
- 1. History and culture
 - 2. Art and music
 - 3. Quantity, measurement, and spatial relations
 - 4. Language and literature

Question ID : 4410091609455
Option 1 ID : 4410096356737
Option 2 ID : 4410096356739
Option 3 ID : 4410096356736
Option 4 ID : 4410096356738

Q.11 Excluding rotations and reflections, how many distinct magic squares exist for order 3 using 1 through 9?

- Ans
- 1. 275305224 total variants
 - 2. Infinite solutions via scaling factors
 - 3. 880 fundamental arrangements
 - 4. Exactly one unique configuration

Question ID : 4410091564660
Option 1 ID : 4410096180218
Option 2 ID : 4410096180219
Option 3 ID : 4410096180216
Option 4 ID : 4410096180217

Q.12 Science education is best described as a process of:

- Ans
- 1. Passive reception of information provided by teachers and textbooks
 - 2. Accumulation of factual knowledge without conceptual understanding
 - 3. Inquiry-based learning that links theory with real-life applications
 - 4. Training students exclusively for competitive scientific examinations

Question ID : 4410091603419
Option 1 ID : 4410096332873
Option 2 ID : 4410096332874
Option 3 ID : 4410096332872
Option 4 ID : 4410096332875

Q.13 Which feature of the secondary science kit most directly supports the performance of laboratory experiments prescribed by CBSE for Classes IX and X?

- Ans**
- 1. Provision of teacher training modules within the kit
 - 2. Inclusion of scientific apparatus matching CBSE curriculum
 - 3. Addition of historical background of scientific concepts
 - 4. Distribution of theoretical workbooks for students

Question ID : 4410091662867
Option 1 ID : 4410096564774
Option 2 ID : 4410096564773
Option 3 ID : 4410096564776
Option 4 ID : 4410096564775

Q.14 Which of the following is an important step schools can take to promote gender equality?

- Ans**
- 1. Separating boys and girls in all activities
 - 2. Ensuring equal opportunities for all genders
 - 3. Focusing activities only on girls
 - 4. Ignoring gender issues in school programs

Question ID : 4410091628040
Option 1 ID : 4410096430341
Option 2 ID : 4410096430338
Option 3 ID : 4410096430339
Option 4 ID : 4410096430340

Q.15 Which of the following is an example of a visual teaching aid in language teaching?

- Ans**
- 1. Flashcards showing words and pictures
 - 2. Teacher giving oral instructions to the class
 - 3. Teacher conducting group discussion in class
 - 4. Students reading silently from textbooks

Question ID : 4410091551046
Option 1 ID : 4410096126430
Option 2 ID : 4410096126429
Option 3 ID : 4410096126427
Option 4 ID : 4410096126428

Q.16 Why is a science kit considered important in school science teaching?

- Ans
- 1. It reduces the time spent on classroom teaching activities
 - 2. It helps students perform experiments and learn science concepts
 - 3. It replaces textbooks as the main source of science knowledge
 - 4. It is mainly used for decoration in school science laboratories

Question ID : 4410091551118
Option 1 ID : 4410096126713
Option 2 ID : 4410096126714
Option 3 ID : 4410096126712
Option 4 ID : 4410096126711

Q.17 A school Eco-Club organizes a trip to a nearby water treatment facility. Which primary non-cognitive goal is best achieved by this application activity?

- Ans
- 1. Appreciating society linkages
 - 2. Promoting cooperative skills
 - 3. Verifying conceptual theories
 - 4. Developing precise inquiry

Question ID : 4410091551603
Option 1 ID : 4410096129049
Option 2 ID : 4410096129048
Option 3 ID : 4410096129047
Option 4 ID : 4410096129050

Q.18 Which example best illustrates the use of recreational mathematics to promote the joy of learning?

- Ans
- 1. Focusing only on textbook exercises every day
 - 2. Limiting lessons to lecture-based explanations
 - 3. Solving puzzles and playing math games in class
 - 4. Assigning repetitive drills with no variation

Question ID : 4410091641198
Option 1 ID : 4410096481947
Option 2 ID : 4410096481948
Option 3 ID : 4410096481945
Option 4 ID : 4410096481946

Q.19 Why is recreational mathematics important in learning mathematics?

- Ans
- 1. It helps students avoid common mistakes.
 - 2. It develops problem-solving skills in a fun way.
 - 3. It focuses only on memorizing formulas.
 - 4. It teaches only routine calculations.

Question ID : 4410091687913
Option 1 ID : 4410096658441
Option 2 ID : 4410096658438
Option 3 ID : 4410096658439
Option 4 ID : 4410096658440

Q.20 What is a key benefit of addressing diversity and inequality in Indian classrooms?

- Ans**
- 1. It encourages competition between students
 - 2. It limits cultural exchange
 - 3. It maintains traditional classroom structures
 - 4. It promotes equal participation among all students

Question ID : 4410091628064

Option 1 ID : 4410096430434

Option 2 ID : 4410096430437

Option 3 ID : 4410096430435

Option 4 ID : 4410096430436

