



GOVT. OF NCT OF DELHI
Delhi Subordinate Services Selection Board
FC-18, Institutional Area, Karkardooma, Delhi – 110092.
www.dsssb.delhigovt.nic.in

	[REDACTED]
e	[REDACTED]
ie	ION Digital Zone iDZ 1 Sector 62
	19/02/2026
	1:00 PM - 3:00 PM
	Assistant Teacher Primary

Intelligence and Reasoning Ability

In a certain code language, 'FISH' is coded as '5892' and 'SHIP' is coded as '7589'.
How will 'SHIP' be coded in that language?

Question ID : 4410091619037
Option 1 ID : 4410096395022
Option 2 ID : 4410096395021
Option 3 ID : 4410096395023
Option 4 ID : 4410096395020

In a certain code language, 'FISH' is coded as '5892' and 'SHIP' is coded as '7589'.
How will 'SHIP' be coded in that language?

Question ID : 441009795657
Option 1 ID : 4410093136628
Option 2 ID : 4410093136629
Option 3 ID : 4410093136627
Option 4 ID : 4410093136630

B, U, C, K, E, T and S, are sitting around a circular table facing the table. Only one person sits between U and B when counted from the right. K sits third to the right of U. S sits third to the left of E. T sits to the right of S. C is not an immediate neighbor of S. How many people sit between U and B when counted from the right of C?

Question ID : 4410091518794

Option 1 ID : 4410095998455

Option 2 ID : 4410095998457

Option 3 ID : 4410095998454

Option 4 ID : 4410095998456

Find the number in place of '?' in the given series?

52 88 ?

Question ID : 4410091528112

Option 1 ID : 4410096035641

Option 2 ID : 4410096035642

Option 3 ID : 4410096035644

Option 4 ID : 4410096035643

Study the following letter series and answer the question that follows. Counting from the beginning left to right only.

3 Q X M X O G W S H Y L X T H A A (Right)

How many consonants are there, each of which is immediately preceded by a vowel and immediately followed by a vowel? 6868

Question ID : 441009780787

Option 1 ID : 4410093077154

Option 2 ID : 4410093077153

Option 3 ID : 4410093077152

Option 4 ID : 4410093077151

English alphabetical order, three of the following four letter cluster in a certain way and thus form a group. Which is the one that does that group?
Which one out is not based on the number of consonants/vowels or their letter cluster)4370

.
V
J
E

Question ID : 441009790474

Option 1 ID : 4410093115896

Option 2 ID : 4410093115898

Option 3 ID : 4410093115895

Option 4 ID : 4410093115897

Which one in place of ? in the given series based on the English alphabetical order?

Q R M D S Y T K ?

Question ID : 4410091614436

Option 1 ID : 4410096376563

Option 2 ID : 4410096376562

Option 3 ID : 4410096376561

Option 4 ID : 4410096376564

Which one in the place of '?' in the following equation, if '+' and '-' are

interchanged?

$8 \times 126 + 295 \div 948 \times 237 = ?4226$

Question ID : 441009554691

Option 1 ID : 4410092174078

Option 2 ID : 4410092174081

Option 3 ID : 4410092174080

Option 4 ID : 4410092174079

that follows the same pattern as that followed by the two pairs
oth pairs follow the same pattern.

07

IMQ

IMP

ILP

IMQ

Question ID : 441009767999
Option 1 ID : 4410093025991
Option 2 ID : 4410093025990
Option 3 ID : 4410093025992
Option 4 ID : 4410093025989

14th from the bottom and 19th from the top in his class. How many
ere in his class?

Question ID : 4410091614417
Option 1 ID : 4410096376487
Option 2 ID : 4410096376486
Option 3 ID : 4410096376488
Option 4 ID : 4410096376485

H, Q, R and S has an exam on a different day of a week starting
and ending on Sunday of the same week. E has exam on Thursday
m on Saturday. R has exam immediately before H. S has exam on
s after G. F has exam immediately after H. How many people have
S and F?

Question ID : 4410091618860
Option 1 ID : 4410096394313
Option 2 ID : 4410096394315
Option 3 ID : 4410096394312
Option 4 ID : 4410096394314

the word JUMBLED is changed to the letter immediately following it alphabetical order and each consonant is changed to the letter preceding it in the English alphabetical order. How many vowels are up of letters thus formed?

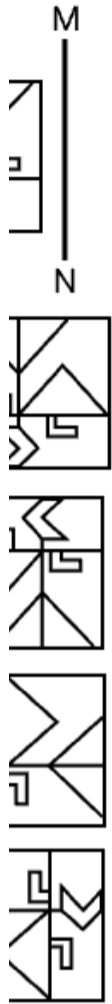
Question ID : 441009216511
Option 1 ID : 441009850083
Option 2 ID : 441009850084
Option 3 ID : 441009850085
Option 4 ID : 441009850086

, S, T, U and V has an exam on a different day of a week starting and ending on Sunday of the same week.
i on Tuesday. Only one person has exam between U and V. U has ay immediately before T but not on a Wednesday. Only two people between V and T. V's exam is on one of the days after R but on one of e S. Q has exam on the day immediately after P.
ple have exams before V?

Question ID : 4410091422313
Option 1 ID : 4410095618161
Option 2 ID : 4410095618159
Option 3 ID : 4410095618158
Option 4 ID : 4410095618160

Adda247

ect mirror image of the given figure when the mirror is placed at below.



Question ID : 4410091524710
Option 1 ID : 4410096022047
Option 2 ID : 4410096022048
Option 3 ID : 4410096022049
Option 4 ID : 4410096022050

Two sets of numbers. In each set of numbers, a certain operation on the first number results in the second number. In the first set, a mathematical operation on the second number results in the first number and so on. Which of the given options follows the same set of operations as in the question?
A) 16 and 37
B) 18 and 72
C) 17 and 68
D) 38 and 152
E) 51 and 255

- B) 18 - 72
- C) 17 - 68
- D) 38 - 152
- E) 51 - 255

Question ID : 441009528750
Option 1 ID : 4410092070404
Option 2 ID : 4410092070405
Option 3 ID : 4410092070407
Option 4 ID : 4410092070406

Relationship: L is the sister of U. T is the father of N. N is the son of U. How is T related to L?

- A) T is L's husband
- B) T is L's son
- C) T is L's brother
- D) T is L's father
- E) T is L's uncle

Question ID : 4410091619016
Option 1 ID : 4410096394938
Option 2 ID : 4410096394937
Option 3 ID : 4410096394939
Option 4 ID : 4410096394936

Four words are given in English alphabetical order, three of the following four are alike in a certain way and thus form a group. Which is the one that does not belong to that group?

A) Man
B) Out
C) Not
D) Based
E) On



Question ID : 441009776845
Option 1 ID : 4410093061385
Option 2 ID : 4410093061384
Option 3 ID : 4410093061386
Option 4 ID : 4410093061383

Place the symbol '?' in the following equation if '+' and '-' are interchanged and 'x' and '÷' are interchanged?
 $7 - 7 = ?$

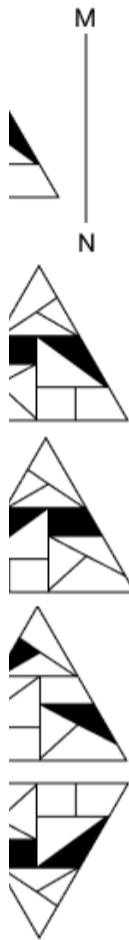
Question ID : 4410091609185
Option 1 ID : 4410096355656
Option 2 ID : 4410096355659
Option 3 ID : 4410096355657
Option 4 ID : 4410096355658

How many letters will remain unchanged if each letter in the word 'ARRANGE' is arranged in the English alphabetical order?

Question ID : 441009763968
Option 1 ID : 4410093009867
Option 2 ID : 4410093009865
Option 3 ID : 4410093009866
Option 4 ID : 4410093009868



ect mirror image of the given figure when the mirror is placed at below.



Question ID : 441009864846
Option 1 ID : 4410093412485
Option 2 ID : 4410093412484
Option 3 ID : 4410093412487
Option 4 ID : 4410093412486

Following was a major goal of India's 1991 Trade and Investment reforms?

Protect local handicrafts

Reduce population growth

Improve international competitiveness and attract foreign investments

Reduce all taxes

Question ID : 441009226535
Option 1 ID : 441009886978
Option 2 ID : 441009886977
Option 3 ID : 441009886979
Option 4 ID : 441009886980

Which state has the largest wind farm cluster in India?

Tamil Nadu

Kerala

Rajasthan

Question ID : 441009210067
Option 1 ID : 441009825360
Option 2 ID : 441009825359
Option 3 ID : 441009825362
Option 4 ID : 441009825361

Which belts in India is rich in copper and zinc minerals that are associated with the Dharwar system of rocks?

Deccan Trap Belt

Western Region (Aravali Range)

Western Plateau Region (Sahyadri Range)

Eastern Plateau Region

Question ID : 441009207623
Option 1 ID : 441009816464
Option 2 ID : 441009816465
Option 3 ID : 441009816463
Option 4 ID : 441009816462

Which official theme chosen by South Africa for hosting the G20 Summit in 2010?

Partnership, Equality, Sustainability

Partnership, One Future

Partnership, Rebuild, Restore

Partnership First

Question ID : 4410091556440
Option 1 ID : 4410096148332
Option 2 ID : 4410096148330
Option 3 ID : 4410096148333
Option 4 ID : 4410096148331

Which component inside a decibel meter helps detect sound?

Inductive coil

Piezoelectric crystal

Microphone

Laser diode

Question ID : 441009513699
Option 1 ID : 4410092009964
Option 2 ID : 4410092009965
Option 3 ID : 4410092009966
Option 4 ID : 4410092009967

Chandra Das was awarded the Padma Shri in the field of Art. Which of the following statements is correct?

He is a renowned sitar player from Maharashtra.

He is a celebrated dhak player from West Bengal.

He is a contemporary painter from Delhi.

He is a classical vocalist from Tamil Nadu.

Question ID : 441009312277
Option 1 ID : 4410091215582
Option 2 ID : 4410091215584
Option 3 ID : 4410091215585
Option 4 ID : 4410091215583

Which of the following statements is CORRECT regarding the term of office of a Governor in India?

A Governor holds office during the pleasure of the President and may resign by writing to the President.

The Legislative Assembly of the State elects the Governor.

A Governor cannot resign once appointed until the five-year term is complete.

A Governor can be removed only through impeachment in Parliament on the recommendation of the Chief Justice of India.

Question ID : 441009672147
Option 1 ID : 4410092642683
Option 2 ID : 4410092642685
Option 3 ID : 4410092642684
Option 4 ID : 4410092642682

Community dominated the Bastar region during the British indirect

l

Question ID : 441009875975
Option 1 ID : 4410093457518
Option 2 ID : 4410093457517
Option 3 ID : 4410093457520
Option 4 ID : 4410093457519

la Project is related to the development of which type of ?

s

Cities

ys

ays

Question ID : 44100943734
Option 1 ID : 441009174385
Option 2 ID : 441009174386
Option 3 ID : 441009174383
Option 4 ID : 441009174384

25, which country withdrew from China's Belt and Road Initiative
ing not to renew the 2017 Memorandum of Understanding with

ines

sia

la

n

Question ID : 441009207062
Option 1 ID : 441009814191
Option 2 ID : 441009814192
Option 3 ID : 441009814193
Option 4 ID : 441009814194

17 Battle of Chinhat, the British contingent suffered a loss under the
which of the following officials?

Lawrence

Nicholson

Hodson

Outram

Question ID : 4410091551145

Option 1 ID : 4410096126828

Option 2 ID : 4410096126829

Option 3 ID : 4410096126827

Option 4 ID : 4410096126830

18 Which dancer is credited with reviving Bharatanatyam and founding the
foundation?

Usha Narayan

Usha Valli

Usha Devi Arundale

Usha Sarabhai

Question ID : 441009753519

Option 1 ID : 4410092968085

Option 2 ID : 4410092968088

Option 3 ID : 4410092968086

Option 4 ID : 4410092968087

19 In a binary search, which system of units is primarily used?

Standard system

Binary system

Decimal system

Hexadecimal system

Question ID : 441009513713

Option 1 ID : 4410092010031

Option 2 ID : 4410092010028

Option 3 ID : 4410092010029

Option 4 ID : 4410092010030

First Round Table Conference when Congress appointed a
to hold direct talks with Lord Irwin, the British Viceroy of India, which of
the following leaders was chosen for this role?

Mahatma Gandhi

Jawahar Chandra Bose

J.B. Patel

Jawahar Lal Nehru

Question ID : 4410091551242

Option 1 ID : 4410096127259

Option 2 ID : 4410096127261

Option 3 ID : 4410096127260

Option 4 ID : 4410096127262

Which folk dances are traditionally associated with which deity and region?

Kuchipudi, Odisha

Kuchipudi, Tamil Nadu

Kuchipudi, Uttar Pradesh

Kuchipudi, West Bengal

Question ID : 441009749224

Option 1 ID : 4410092950735

Option 2 ID : 4410092950737

Option 3 ID : 4410092950734

Option 4 ID : 4410092950736

Which of the following is a prominent feature of the Peninsular Plateau in India?

Moraines

Islands

Plateaus

Mountains

Question ID : 441009265363

Option 1 ID : 4410091031338

Option 2 ID : 4410091031337

Option 3 ID : 4410091031339

Option 4 ID : 4410091031336

Under the following circumstances can the Parliament legislate on a State List?

- The Governor of a State requests intervention by the Union Government
- The Rajya Sabha passes a resolution by a two-thirds majority in the national interest
- The Lok Sabha passes a resolution by a simple majority in the national interest
- The President gives assent without recommendation

Question ID : 441009672104
Option 1 ID : 4410092642516
Option 2 ID : 4410092642515
Option 3 ID : 4410092642514
Option 4 ID : 4410092642517

Which is the primary objective of the 130th Constitutional Amendment Bill (2025)?

- To expedite the resignation of public officeholders who are jailed
- To streamline the President's election process
- To expand the powers of local self-governments
- To centralize the federal distribution of powers

Question ID : 4410091563046
Option 1 ID : 4410096173749
Option 2 ID : 4410096173747
Option 3 ID : 4410096173748
Option 4 ID : 4410096173750

Which award did Jay Shah, the newly appointed ICC Chairman, receive at the Sports Awards 2025?

- Arjuna Recognition Game Changer Award
- Sportsman of the Year
- Lifetime Achievement Award
- Sports Star of the Year

Question ID : 441009160570
Option 1 ID : 441009636146
Option 2 ID : 441009636148
Option 3 ID : 441009636147
Option 4 ID : 441009636145

Following Panchayat levels is responsible for district-level planning

Panchayat

bha

Panchayat

irishad

Question ID : 441009101123
Option 1 ID : 441009402503
Option 2 ID : 441009402505
Option 3 ID : 441009402502
Option 4 ID : 441009402504

l and Numerical Ability

ne with a height of 16 cm and a radius of the base of 12 cm is
de into solid spheres of radius 4 cm each. Find the number of
d.

Question ID : 441009345188
Option 1 ID : 4410091346703
Option 2 ID : 4410091346704
Option 3 ID : 4410091346702
Option 4 ID : 4410091346701

around a circular track of length 2400 m, with speed of 15 km/hr,
27 km/hr, respectively. If they start at the same point and at the
he same direction, after how much time will they meet again at the

utes

utes

utes

utes

Question ID : 4410099090
Option 1 ID : 44100936114
Option 2 ID : 44100936115
Option 3 ID : 44100936112
Option 4 ID : 44100936113

eight of a family of five members whose weights are 40 kg, 48 kg, and 35 kg is:

]

]

]

]

Question ID : 441009582039
Option 1 ID : 4410092283282
Option 2 ID : 4410092283283
Option 3 ID : 4410092283284
Option 4 ID : 4410092283285

f a special species of birds in a bird sanctuary on 1st January 2021 r population is increased for two years at the rate 5%, and 2% for the next one year, what is their total number on 1st January led to the nearest natural number)

Question ID : 44100927875
Option 1 ID : 441009111049
Option 2 ID : 441009111050
Option 3 ID : 441009111048
Option 4 ID : 441009111051

ed among A, B, C and D in such a way that the shares of A and B, B and D are in the ratios of 2 : 3, 4 : 5 and 6 : 7, respectively. The share

Question ID : 441009899014
Option 1 ID : 4410093550127
Option 2 ID : 4410093550126
Option 3 ID : 4410093550128
Option 4 ID : 4410093550129

Numbers are in the ratio 3 : 5. If the sum of numbers is 96, find the numbers.

Question ID : 44100911709

Option 1 ID : 44100946643

Option 2 ID : 44100946646

Option 3 ID : 44100946645

Option 4 ID : 44100946644

Find the largest number which, when divided by 37 and 60, leaves remainders 14 and 21 respectively.

Question ID : 4410098242

Option 1 ID : 44100932677

Option 2 ID : 44100932678

Option 3 ID : 44100932676

Option 4 ID : 44100932679

A merchant mixes two varieties of tea costing ₹240/kg and ₹280/kg in a ratio of 3 : 2. He sells the mixture at ₹300/kg. What is the profit percentage? (Round off to two decimal places.)

6

Question ID : 4410091622219

Option 1 ID : 4410096407666

Option 2 ID : 4410096407665

Option 3 ID : 4410096407664

Option 4 ID : 4410096407667

Onions goes up by 26%. By how much percentage must a housewife
reduce her consumption of onions, so that the expenditure on onions remains the
same (round off to two places of decimals)?

1
6
1
1

Question ID : 4410096007
Option 1 ID : 44100923807
Option 2 ID : 44100923808
Option 3 ID : 44100923805
Option 4 ID : 44100923806

Workers P and Q paint the one flat in 12 days. If P alone

Question ID : 44100920044
Option 1 ID : 44100979905
Option 2 ID : 44100979906
Option 3 ID : 44100979908
Option 4 ID : 44100979907

A sum of money (in ₹) will yield ₹860 as simple interest in 2 years at 10% per

Question ID : 441009852718
Option 1 ID : 4410093363846
Option 2 ID : 4410093363844
Option 3 ID : 4410093363845
Option 4 ID : 4410093363847

g a well 69 feet deep in 13 days. How many men can dig a well 138 days?

Question ID : 441009541631
Option 1 ID : 4410092121920
Option 2 ID : 4410092121921
Option 3 ID : 4410092121922
Option 4 ID : 4410092121923

of the goods are sold at a profit of 27%. Of the remaining goods, t a profit of 39%, and the rest are sold at a loss of 26%. If the overall :termine the value of x.

Question ID : 441009915084
Option 1 ID : 4410093614590
Option 2 ID : 4410093614588
Option 3 ID : 4410093614589
Option 4 ID : 4410093614587

: a spherical balloon is increased by 2 cm, then its surface area 52 cm². The radius of the balloon after the increase was:

Question ID : 44100944865
Option 1 ID : 441009178676
Option 2 ID : 441009178678
Option 3 ID : 441009178679
Option 4 ID : 441009178677

Price of a television is ₹60,000. During the festive season, a certain discount is declared. Mr. Gopal bought it at the reduced price. He paid ₹40,000 and got a profit of 40%, what is the percentage of discount

10%

20%

30%

40%

Question ID : 44100944658

Option 1 ID : 441009177851

Option 2 ID : 441009177854

Option 3 ID : 441009177852

Option 4 ID : 441009177853

100 litres of milk. From this vessel, 5 litres of milk is taken out and replaced with water. The process is repeated once more. Find the quantity of milk (rounded off to two decimal places) remaining in the vessel.

Question ID : 441009305046

Option 1 ID : 4410091186854

Option 2 ID : 4410091186856

Option 3 ID : 4410091186855

Option 4 ID : 4410091186857

Area (in cm^2) of an equilateral triangle whose side is $2\sqrt{3}$

3

3

3

3

Adda247

Question ID : 4410099004

Option 1 ID : 44100935782

Option 2 ID : 44100935783

Option 3 ID : 44100935780

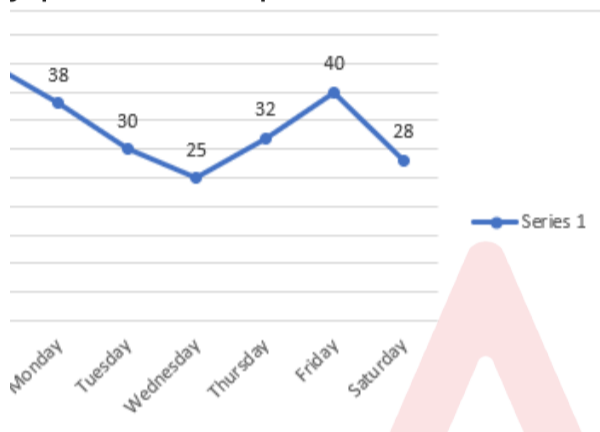
Option 4 ID : 44100935781

from A to B with speed of 18 km/hr and comes back from B to A
Find his average speed (in km/hr).

Question ID : 4410098520
Option 1 ID : 44100933813
Option 2 ID : 44100933814
Option 3 ID : 44100933815
Option 4 ID : 44100933812

Graph given below shows the maximum temperature (in degree Celsius) on the seven days of a particular week.

Study the graph and answer the question that follows.



Find the average temperature (in degree Celsius) of first four days (i.e., Sunday to Wednesday).

Question ID : 4410095718
Option 1 ID : 44100922650
Option 2 ID : 44100922651
Option 3 ID : 44100922653
Option 4 ID : 44100922652

of $4 \times \sqrt{\frac{11}{161051}} + 3.5$ is equal to:

Question ID : 441009209572
Option 1 ID : 441009823571
Option 2 ID : 441009823573
Option 3 ID : 441009823574
Option 4 ID : 441009823572

Language and Comprehension

In the following question a statement has been given with highlighted text. You have to replace the text with the correct idiom from the given alternatives.

He seems trustworthy, in reality he is an unreliable person who often breaks his promises.

1. A man of letters

2. A weather friend

3. A man of means

4. A man of letters

Question ID : 4410091260971
Option 1 ID : 4410094976741
Option 2 ID : 4410094976744
Option 3 ID : 4410094976743
Option 4 ID : 4410094976742

Choose the most appropriate option to complete the sentence.

The author has emphasized the importance of ethics in journalism and highlighted the need for responsible reporting in shaping society.

1. A man of letters

Question ID : 4410091308116
Option 1 ID : 4410095164125
Option 2 ID : 4410095164123
Option 3 ID : 4410095164124
Option 4 ID : 4410095164126

misspelt word in the sentence and choose the option that has the same meaning.
Surprisingly, yet a sudden surge of embarrassment made her lose her train of thought.

Spoke eloquently

Embarrassment made

Sudden surge

Lost her train of thought.

Question ID : 4410091526610

Option 1 ID : 4410096029558

Option 2 ID : 4410096029560

Option 3 ID : 4410096029559

Option 4 ID : 4410096029561

Choose the most appropriate antonym of the underlined word in the given sentence.

Comprehensive report.

Concise

Extensive

Comprehensive

Question ID : 4410091529504

Option 1 ID : 4410096041104

Option 2 ID : 4410096041106

Option 3 ID : 4410096041103

Option 4 ID : 4410096041105

Choose the most appropriate option that can substitute the underlined words in the given sentence.

Having the agreement and consent of all resolved to remove it.

Unanimously

Collectively

Unilaterally

Unanimously

Question ID : 4410091543783

Option 1 ID : 4410096098225

Option 2 ID : 4410096098223

Option 3 ID : 4410096098222

Option 4 ID : 4410096098224

In a given sentence, a segment is highlighted. You are required to replace the highlighted text with the correct proverb from the given options.
I cleaned a spotless kitchen because she believes that **hard work yields best results**.

Options:
A. Birds grow from small acorns

B. Grease is the best polish

C. Change is no robbery

D. It is said than done

Question ID : 4410091691009

Option 1 ID : 4410096670245

Option 2 ID : 4410096670243

Option 3 ID : 4410096670244

Option 4 ID : 4410096670242

In the following sentence, an appropriate option that can substitute the underlined words in the sentence is given.

With a sound attitude of mind, a right psychology, you cannot **construct anything that will remain firm**.

Options:

A. Steadfast

B. Firm

Question ID : 4410091543747

Option 1 ID : 4410096098054

Option 2 ID : 4410096098055

Option 3 ID : 4410096098056

Option 4 ID : 4410096098057

In the following sentence, two words have been underlined. One of them may contain a misspelt word. Select the option with a misspelt word.

Many patients have made **allegations** of **professional misconduct** against the doctor.

Options:

A. Allegation

B. Misconduct

C. Allegations

D. Misconduct

Question ID : 4410091385270

Option 1 ID : 4410095471822

Option 2 ID : 4410095471823

Option 3 ID : 4410095471821

Option 4 ID : 4410095471820

sentence has been divided into segments. While the first segment is in the correct order, the segments below it are jumbled up. Arrange the segments in the correct order to form a meaningful and coherent sentence.

Segment 1:
The sun had set below the horizon, (S1)

Segments:
(P) The sky was filled with clouds in hues of orange and pink (P) / a cool breeze rustled the leaves and the shadows of trees were cast long and dark (Q) / the world seemed to pause (S) / the birds were silent (R) / and the world seemed to pause (S)

Question ID : 44100929853
Option 1 ID : 441009118870
Option 2 ID : 441009118872
Option 3 ID : 441009118871
Option 4 ID : 441009118869

Choose the most appropriate article to fill in the blank. If no article is needed, choose 'no article required'.

_____ Taj Mahal during her vacation in Agra.

no article required

Question ID : 4410091113652
Option 1 ID : 4410094390607
Option 2 ID : 4410094390606
Option 3 ID : 4410094390608
Option 4 ID : 4410094390609

Arrange the segments to form a coherent statement.

Segment 1: The forest was in darkness (P) / the abandoned house (Q) / creaking with every step (R) / standing at the edge of the forest (S)

Question ID : 4410093246
Option 1 ID : 44100912991
Option 2 ID : 44100912992
Option 3 ID : 44100912994
Option 4 ID : 44100912993

_____ sentence with the appropriate word.

_____ was accepted _____ minor revisions were made to the final draft.

is

Question ID : 4410091553006
Option 1 ID : 4410096134341
Option 2 ID : 4410096134342
Option 3 ID : 4410096134340
Option 4 ID : 4410096134343

_____ most appropriate option to fill in the given blanks.

_____ the table and the pen is _____ the drawer.

to

onto

into

Question ID : 4410091126945
Option 1 ID : 4410094443332
Option 2 ID : 4410094443333
Option 3 ID : 4410094443335
Option 4 ID : 4410094443334

_____ on that is the most appropriate antonym of the highlighted word in
_____ sentence.

_____ confess her mistake and tell the truth.

_____ vledge

;

al

Question ID : 4410091603207
Option 1 ID : 4410096332026
Option 2 ID : 4410096332027
Option 3 ID : 4410096332025
Option 4 ID : 4410096332024

Best appropriate option to fill in the given blanks.

___ and her tone was ___.

gentle

ness, gentleness

er, gentle

er, gently

Question ID : 4410091126907

Option 1 ID : 4410094443184

Option 2 ID : 4410094443186

Option 3 ID : 4410094443187

Option 4 ID : 4410094443185

Read:

Read carefully and answer the following questions.

Fresco, derived from the Italian word fresco meaning "fresh," is a celebrated mural technique that involves applying water-based pigments to freshly laid lime plaster. The process begins with preparing the wall surface by spreading wet plaster, which must remain damp to allow pigments to bond effectively. As the plaster dries, the pigments chemically bond with it, becoming a permanent part of the wall. This method, known as *buon fresco*, requires the artist to work swiftly and precisely, completing each section—called a "giornata" or "day's work"—before the plaster sets. This technique reached its pinnacle during the Italian Renaissance, most notably through the work of Michelangelo. Though he considered himself primarily a sculptor, Michelangelo was commissioned by Pope Julius II to paint the ceiling of the Sistine Chapel as part of a project he undertook from 1508 to 1512. The ceiling features over 300 figures from the Book of Genesis, including the iconic Creation of Adam, which showcases his mastery of anatomy and expressive composition. Michelangelo returned to the Sistine Chapel to paint *The Last Judgment* on the altar wall (1536–1541), a dramatic and powerful fresco that reflects his evolving style and deepening psychological insight. Despite personal frustrations with the medium, Michelangelo's frescoes remain monumental in art history. His disciplined approach and visionary execution transformed the humble technique of fresco into a lasting testament to the power of fresco as both a technical and expressive art form.

Question 16:

Choose the most appropriate title for the passage.

The History of Italian Plaster

The Art and History of Sculpture

Michelangelo and the Pinnacle of Fresco Painting

Pope Julius II and his Love for Fresco

Question ID : 4410091298322

Option 1 ID : 4410095125629

Option 2 ID : 4410095125626

Option 3 ID : 4410095125627

Option 4 ID : 4410095125628

Ques

Read the passage carefully and answer the following questions.

Fresco, derived from the Italian word fresco meaning "fresh," is a celebrated mural painting technique that involves applying water-based pigments to freshly laid lime plaster. The process requires preparing the wall surface by spreading wet plaster, which must remain damp to allow pigments to bond effectively. As the plaster dries, the pigments chemically bond with it, creating a permanent part of the wall. This method, known as *buon fresco*, requires artists to work swiftly and precisely, completing each section—called a "giornata" or "day's work"—before the plaster sets. This technique reached its pinnacle during the Italian Renaissance, most notably through the work of Michelangelo. Though he considered himself a sculptor, Michelangelo was commissioned by Pope Julius II to paint the ceiling of the Sistine Chapel as part of a project he undertook from 1508 to 1512. The ceiling features over 300 figures from the Book of Genesis, including the iconic Creation of Adam, which showcases his mastery of anatomical form and expressive composition. Michelangelo returned to the Sistine Chapel to paint *The Last Judgment* on the altar wall (1536–1541), a dramatic and powerful fresco that reflects his evolving style and deepening psychological insight. Despite personal frustrations with the medium, Michelangelo's frescoes remain monumental works in art history. His disciplined approach and visionary execution transformed the fresco into a lasting testament to the power of fresco as both a technical and expressive art form.

Ques 10 : 17

Which of the following is the correct inference that can be drawn from the passage.

Buon Fresco requires artists to work very slowly and patiently

Pope Julius II was the greatest Fresco painter of Italian Renaissance

Michelangelo was moody and did not agree to the commission for Sistine Chapel

Michelangelo's artistic style and psychology evolved over time and his frescoes reflect this

Question ID : 4410091298323

Option 1 ID : 4410095125633

Option 2 ID : 4410095125631

Option 3 ID : 4410095125630

Option 4 ID : 4410095125632

Adda247

n:

age carefully and answer the following questions.

g, derived from the Italian word fresco meaning "fresh," is a celebrated mural involves applying water-based pigments to freshly laid lime plaster. The process preparing the wall surface by spreading wet plaster, which must remain damp to pigments effectively. As the plaster dries, the pigments chemically bond with it, work a permanent part of the wall. This method, known as *buon fresco*, requires rk swiftly and precisely, completing each section—called a "giornata" or "day's the plaster sets. This technique reached its pinnacle during the Italian most notably through the work of Michelangelo. Though he considered himself lptor, Michelangelo was commissioned by Pope Julius II to paint the ceiling of the a project he undertook from 1508 to 1512. The ceiling features over 300 figures of Genesis, including the iconic Creation of Adam, which showcases his mastery omy and expressive composition. Michelangelo returned to the Sistine Chapel o paint The Last Judgment on the altar wall (1536–1541), a dramatic and arged fresco that reflects his evolving style and deepening psychological insight. onal frustrations with the medium, Michelangelo's frescoes remain monumental in art history. His disciplined approach and visionary execution transformed the into a lasting testament to the power of fresco as both a technical and expressive

lo : 18

ropriate structure of the passage from the options given below.

re and contrast

tory

and effect

ntative

Question ID : 4410091298324

Option 1 ID : 4410095125637

Option 2 ID : 4410095125634

Option 3 ID : 4410095125636

Option 4 ID : 4410095125635



n:

age carefully and answer the following questions.

g, derived from the Italian word fresco meaning "fresh," is a celebrated mural involves applying water-based pigments to freshly laid lime plaster. The process preparing the wall surface by spreading wet plaster, which must remain damp to pigments effectively. As the plaster dries, the pigments chemically bond with it, work a permanent part of the wall. This method, known as *buon fresco*, requires work swiftly and precisely, completing each section—called a "giornata" or "day's the plaster sets. This technique reached its pinnacle during the Italian most notably through the work of Michelangelo. Though he considered himself a painter, Michelangelo was commissioned by Pope Julius II to paint the ceiling of the a project he undertook from 1508 to 1512. The ceiling features over 300 figures of Genesis, including the iconic Creation of Adam, which showcases his mastery of form and expressive composition. Michelangelo returned to the Sistine Chapel to paint *The Last Judgment* on the altar wall (1536–1541), a dramatic and charged fresco that reflects his evolving style and deepening psychological insight. Despite personal frustrations with the medium, Michelangelo's frescoes remain monumental in art history. His disciplined approach and visionary execution transformed the medium into a lasting testament to the power of fresco as both a technical and expressive

lo : 19

Correct tone of the passage?

Objective

Subjective

Informative

Argumentative

Question ID : 4410091298325

Option 1 ID : 4410095125638

Option 2 ID : 4410095125640

Option 3 ID : 4410095125641

Option 4 ID : 4410095125639

Adda247

Ques

Read the passage carefully and answer the following questions.

Fresco, derived from the Italian word fresco meaning "fresh," is a celebrated mural painting technique that involves applying water-based pigments to freshly laid lime plaster. The process begins by preparing the wall surface by spreading wet plaster, which must remain damp to allow pigments to bond effectively. As the plaster dries, the pigments chemically bond with it, creating a permanent part of the wall. This method, known as *buon fresco*, requires the artist to work swiftly and precisely, completing each section—called a "giornata" or "day's work"—before the plaster sets. This technique reached its pinnacle during the Italian Renaissance, most notably through the work of Michelangelo. Though he considered himself primarily a sculptor, Michelangelo was commissioned by Pope Julius II to paint the ceiling of the Sistine Chapel as part of a project he undertook from 1508 to 1512. The ceiling features over 300 figures from the Book of Genesis, including the iconic Creation of Adam, which showcases his mastery of anatomy and expressive composition. Michelangelo returned to the Sistine Chapel to paint *The Last Judgment* on the altar wall (1536–1541), a dramatic and powerful fresco that reflects his evolving style and deepening psychological insight. Despite his personal frustrations with the medium, Michelangelo's frescoes remain monumental works in art history. His disciplined approach and visionary execution transformed the fresco into a lasting testament to the power of fresco as both a technical and expressive art form.

Ques

Choose the best synonym for the word **pinnacle** in the passage.

Question ID : 4410091298326

Option 1 ID : 4410095125642

Option 2 ID : 4410095125645

Option 3 ID : 4410095125643

Option 4 ID : 4410095125644

Ques

यदि किसी भाग में वर्तनी संबंधी अशुद्धि है तो उसे त्रुटि आकांक्षा हो रही है।

.

|

|

त्रुटि

Adda247

Question ID : 4410091624829

Option 1 ID : 4410096417843

Option 2 ID : 4410096417845

Option 3 ID : 4410096417846

Option 4 ID : 4410096417844

य में रेखांकित शब्द के विलोम शब्द का चयन दिए गए विकल्पों में से कीजिए-
न्प को देखकर मोहित न होइए।

Question ID : 4410091618672

Option 1 ID : 4410096393561

Option 2 ID : 4410096393562

Option 3 ID : 4410096393560

Option 4 ID : 4410096393559

II प्राप्त करने के लिए सलीम -----पढ़ता है।' वाक्य के रिक्त
या-विशेषण शब्द कौन-सा है?

Question ID : 4410091278324

Option 1 ID : 4410095045246

Option 2 ID : 4410095045245

Option 3 ID : 4410095045243

Option 4 ID : 4410095045244

इड़ा आश्चर्य हुआ ।
शब्द का पर्यायवाची क्या होगा ?

Question ID : 4410091624846

Option 1 ID : 4410096417912

Option 2 ID : 4410096417913

Option 3 ID : 4410096417911

Option 4 ID : 4410096417914

यों में से वर्तनी की दृष्टि से शुद्ध वाक्य का चयन कीजिए।

शभूनाथ है।

निरसता थी।

निरीह पशु है।

राजा हिंदु हैं।

Question ID : 4410091526671

Option 1 ID : 4410096029803

Option 2 ID : 4410096029804

Option 3 ID : 4410096029805

Option 4 ID : 4410096029802

य खंडों को सही क्रम में व्यवस्थित करें -

Question ID : 441009647593

Option 1 ID : 4410092544421

Option 2 ID : 4410092544419

Option 3 ID : 4410092544420

Option 4 ID : 4410092544418

य के रेखांकित शब्द का पर्यायवाची कौन-सा नहीं है?
'गी कृष्ण की महिमा का गुणगान हुआ।'

Question ID : 4410091530815

Option 1 ID : 4410096046343

Option 2 ID : 4410096046346

Option 3 ID : 4410096046345

Option 4 ID : 4410096046344

र आदमी हैं ।
रिक्त स्थान की पूर्ति के लिए उचित कारक शब्द का चयन करें -

Question ID : 4410091308689

Option 1 ID : 4410095166394

Option 2 ID : 4410095166395

Option 3 ID : 4410095166397

Option 4 ID : 4410095166396

1 चयन कर रिक्त स्थान की पूर्ति कीजिए ।
.....रहा है।'

Question ID : 4410091524816

Option 1 ID : 4410096022474

Option 2 ID : 4410096022473

Option 3 ID : 4410096022471

Option 4 ID : 4410096022472

पों में से उचित क्रिया का चयन करके वाक्य पूर्ण करें-
के लिए बच्चों ने सारी रात जागकर..... की।

Question ID : 4410091254797

Option 1 ID : 4410094952175

Option 2 ID : 4410094952172

Option 3 ID : 4410094952173

Option 4 ID : 4410094952174

। शब्द का सही विलोम चुनिए।
साथ घात किया है।'

Question ID : 4410091526898

Option 1 ID : 4410096030702

Option 2 ID : 4410096030705

Option 3 ID : 4410096030704

Option 4 ID : 4410096030703

रिक्त स्थान में क्रिया-विशेषण शब्द का प्रयोग करें -
'उड़ गये।'

Question ID : 4410091528161

Option 1 ID : 4410096035837

Option 2 ID : 4410096035838

Option 3 ID : 4410096035840

Option 4 ID : 4410096035839

अल्पों में से रेखांकित शब्द का विलोम पहचानिए।
क्षाकृत न्यून होने के कारण फसल प्रभावित हो गई है।'

Question ID : 4410091629883

Option 1 ID : 4410096437619

Option 2 ID : 4410096437620

Option 3 ID : 4410096437618

Option 4 ID : 4410096437617

सही क्रम में लगाइए-
(3)रही (4)है (5)रिया

- 3
4
1
5

Question ID : 4410091141437
Option 1 ID : 4410094500706
Option 2 ID : 4410094500704
Option 3 ID : 4410094500707
Option 4 ID : 4410094500705

लना' मुहावरा का सही अर्थ क्या होगा ?

- वश में करना
देखाना
रना
गाना

Question ID : 4410091629438
Option 1 ID : 4410096435839
Option 2 ID : 4410096435841
Option 3 ID : 4410096435838
Option 4 ID : 4410096435840

n:

को ध्यानपूर्वक पढ़कर पूछे गये प्रश्नों के सही उत्तर दीजिए।
वह मूल्य है जो व्यक्ति को सत्य के मार्ग पर अडिग रखता है तथा सामाजिक व्यवस्था को मजबूत बनाता है।
व्यक्तिगत सफलता का आधार है बल्कि राष्ट्र निर्माण का भी प्राणतत्व है। भ्रष्टाचार और अनैतिकता के इस युग
राज को पतन से बचाती है। व्यक्तिगत स्तर पर सत्यनिष्ठा आत्मविश्वास बढ़ाती है तथा मानसिक शांति प्रदान
में ईमानदार कर्मचारी को सम्मान प्राप्त होता है तथा प्रमोशन मिलता है। शिक्षा क्षेत्र में सत्यनिष्ठावान शिक्षक
स्तुत करते हैं। राजनीति में यह जनसेवा को प्राथमिकता देती है। उद्योगपतियों के लिए सत्यनिष्ठा उपभोक्ता
ती है। परिवार में सत्यनिष्ठा विश्वास का आधार बनती है तथा संतान को नैतिक मूल्य सिखाती है। सामाजिक
दायिक सद्भाव को बढ़ावा देती है। पर्यावरण संरक्षण में सत्यनिष्ठापूर्ण प्रयास ही स्थायी समाधान दे सकते हैं।
सच्ची अमीरी है जो व्यक्ति को आंतरिक संतुष्टि प्रदान करती है तथा समाज को प्रेरित करती है।

lo : 16

सत्यनिष्ठा समाज को किससे बचाती है?

- विकास से
प्रगति से

क उत्थान से

Question ID : 4410091626865
Option 1 ID : 4410096425805
Option 2 ID : 4410096425803
Option 3 ID : 4410096425804
Option 4 ID : 4410096425802

n:

। को ध्यानपूर्वक पढ़कर पूछे गये प्रश्नों के सही उत्तर दीजिए।

। वह मूल्य है जो व्यक्ति को सत्य के मार्ग पर अडिग रखता है तथा सामाजिक व्यवस्था को मजबूत बनाता है।
व्यक्तिगत सफलता का आधार है बल्कि राष्ट्र निर्माण का भी प्राणतत्व है। भ्रष्टाचार और अनैतिकता के इस युग
। आज को पतन से बचाती है। व्यक्तिगत स्तर पर सत्यनिष्ठा आत्मविश्वास बढ़ाती है तथा मानसिक शांति प्रदान
में ईमानदार कर्मचारी को सम्मान प्राप्त होता है तथा प्रमोशन मिलता है। शिक्षा क्षेत्र में सत्यनिष्ठावान शिक्षक
स्तुत करते हैं। राजनीति में यह जनसेवा को प्राथमिकता देती है। उद्योगपतियों के लिए सत्यनिष्ठा उपभोक्ता
ती है। परिवार में सत्यनिष्ठा विश्वास का आधार बनती है तथा संतान को नैतिक मूल्य सिखाती है। सामाजिक
दायिक सद्भाव को बढ़ावा देती है। पर्यावरण संरक्षण में सत्यनिष्ठापूर्ण प्रयास ही स्थायी समाधान दे सकते हैं।
। सच्ची अमीरी है जो व्यक्ति को आंतरिक संतुष्टि प्रदान करती है तथा समाज को प्रेरित करती है।

lo : 17

! सत्यनिष्ठा का मुख्य कार्य क्या है?

। मूर्च्छि प्राप्त करना

क लाभ कमाना

मार्ग पर अडिग रखना

। विस्तार करना

Question ID : 4410091626866

Option 1 ID : 4410096425807

Option 2 ID : 4410096425808

Option 3 ID : 4410096425806

Option 4 ID : 4410096425809

n:

। को ध्यानपूर्वक पढ़कर पूछे गये प्रश्नों के सही उत्तर दीजिए।

। वह मूल्य है जो व्यक्ति को सत्य के मार्ग पर अडिग रखता है तथा सामाजिक व्यवस्था को मजबूत बनाता है।
व्यक्तिगत सफलता का आधार है बल्कि राष्ट्र निर्माण का भी प्राणतत्व है। भ्रष्टाचार और अनैतिकता के इस युग
। आज को पतन से बचाती है। व्यक्तिगत स्तर पर सत्यनिष्ठा आत्मविश्वास बढ़ाती है तथा मानसिक शांति प्रदान
में ईमानदार कर्मचारी को सम्मान प्राप्त होता है तथा प्रमोशन मिलता है। शिक्षा क्षेत्र में सत्यनिष्ठावान शिक्षक
स्तुत करते हैं। राजनीति में यह जनसेवा को प्राथमिकता देती है। उद्योगपतियों के लिए सत्यनिष्ठा उपभोक्ता
ती है। परिवार में सत्यनिष्ठा विश्वास का आधार बनती है तथा संतान को नैतिक मूल्य सिखाती है। सामाजिक
दायिक सद्भाव को बढ़ावा देती है। पर्यावरण संरक्षण में सत्यनिष्ठापूर्ण प्रयास ही स्थायी समाधान दे सकते हैं।
। सच्ची अमीरी है जो व्यक्ति को आंतरिक संतुष्टि प्रदान करती है तथा समाज को प्रेरित करती है।

lo : 18

! सत्यनिष्ठा व्यक्तिगत स्तर पर क्या प्रदान करती है?

क शक्ति

। संपत्ति

। शांति

। प्रसिद्धि

Question ID : 4410091626867

Option 1 ID : 4410096425810

Option 2 ID : 4410096425813

Option 3 ID : 4410096425812

Option 4 ID : 4410096425811

n:

। को ध्यानपूर्वक पढ़कर पूछे गये प्रश्नों के सही उत्तर दीजिए।
। वह मूल्य है जो व्यक्ति को सत्य के मार्ग पर अडिग रखता है तथा सामाजिक व्यवस्था को मजबूत बनाता है।
यक्तिगत सफलता का आधार है बल्कि राष्ट्र निर्माण का भी प्राणतत्व है। भ्रष्टाचार और अनैतिकता के इस युग
। आज को पतन से बचाती है। व्यक्तिगत स्तर पर सत्यनिष्ठा आत्मविश्वास बढ़ाती है तथा मानसिक शांति प्रदान
में ईमानदार कर्मचारी को सम्मान प्राप्त होता है तथा प्रमोशन मिलता है। शिक्षा क्षेत्र में सत्यनिष्ठावान शिक्षक
स्तुत करते हैं। राजनीति में यह जनसेवा को प्राथमिकता देती है। उद्योगपतियों के लिए सत्यनिष्ठा उपभोक्ता
ती है। परिवार में सत्यनिष्ठा विश्वास का आधार बनती है तथा संतान को नैतिक मूल्य सिखाती है। सामाजिक
दायिक सद्भाव को बढ़ावा देती है। पर्यावरण संरक्षण में सत्यनिष्ठापूर्ण प्रयास ही स्थायी समाधान दे सकते हैं।
। सच्ची अमीरी है जो व्यक्ति को आंतरिक संतुष्टि प्रदान करती है तथा समाज को प्रेरित करती है।

lo : 19

! उद्योगपतियों के लिए सत्यनिष्ठा क्या अर्जित करती है?

। स्तार

। अनुदान

। कम करना

। विश्वास

Question ID : 4410091626868

Option 1 ID : 4410096425816

Option 2 ID : 4410096425814

Option 3 ID : 4410096425815

Option 4 ID : 4410096425817

n:

। को ध्यानपूर्वक पढ़कर पूछे गये प्रश्नों के सही उत्तर दीजिए।
। वह मूल्य है जो व्यक्ति को सत्य के मार्ग पर अडिग रखता है तथा सामाजिक व्यवस्था को मजबूत बनाता है।
यक्तिगत सफलता का आधार है बल्कि राष्ट्र निर्माण का भी प्राणतत्व है। भ्रष्टाचार और अनैतिकता के इस युग
। आज को पतन से बचाती है। व्यक्तिगत स्तर पर सत्यनिष्ठा आत्मविश्वास बढ़ाती है तथा मानसिक शांति प्रदान
में ईमानदार कर्मचारी को सम्मान प्राप्त होता है तथा प्रमोशन मिलता है। शिक्षा क्षेत्र में सत्यनिष्ठावान शिक्षक
स्तुत करते हैं। राजनीति में यह जनसेवा को प्राथमिकता देती है। उद्योगपतियों के लिए सत्यनिष्ठा उपभोक्ता
ती है। परिवार में सत्यनिष्ठा विश्वास का आधार बनती है तथा संतान को नैतिक मूल्य सिखाती है। सामाजिक
दायिक सद्भाव को बढ़ावा देती है। पर्यावरण संरक्षण में सत्यनिष्ठापूर्ण प्रयास ही स्थायी समाधान दे सकते हैं।
। सच्ची अमीरी है जो व्यक्ति को आंतरिक संतुष्टि प्रदान करती है तथा समाज को प्रेरित करती है।

lo : 20

! परिवार में सत्यनिष्ठा किसका आधार बनती है?

।

Question ID : 4410091626869

Option 1 ID : 4410096425819

Option 2 ID : 4410096425820

Option 3 ID : 4410096425818

Option 4 ID : 4410096425821

principle of Sequentiality suggest about the order of milestones in children?

- Development achieves a plateau at the adolescent stage.
- Development is influenced solely by environmental factors.
- Development follows a pattern where one stage leads to the next.
- Children develop specific responses before general activities.

Question ID : 4410091648597
Option 1 ID : 4410096510611
Option 2 ID : 4410096510608
Option 3 ID : 4410096510609
Option 4 ID : 4410096510610

Which of RTE-2009 is central to improving teacher availability in schools?

- Reduced pupil-teacher ratio (PTR) norms
- National merit tests for teachers
- Rotatory transfer of teachers every three years
- Encouraging teachers to work part-time in private institutions

Question ID : 4410091572427
Option 1 ID : 4410096210659
Option 2 ID : 4410096210656
Option 3 ID : 4410096210657
Option 4 ID : 4410096210658

Which of the following is most effective to promote harmony in a multicultural and multireligious society?

- Recognizing different cultures and religions
- Ignoring differences among communities
- Imposing a single culture for all citizens
- Restricting cultural expression

Question ID : 4410091686673
Option 1 ID : 4410096653522
Option 2 ID : 4410096653524
Option 3 ID : 4410096653523
Option 4 ID : 4410096653525

the theory of development explains that changes in an individual occur from birth to death and at each stage what happens influences the next?

Continuity

Generality to Specificity

Stability

Discontinuity

Question ID : 4410091639525
Option 1 ID : 4410096475646
Option 2 ID : 4410096475647
Option 3 ID : 4410096475645
Option 4 ID : 4410096475648

What are the major impacts of caste-based discrimination in India?

It ensures equal representation of all castes in government positions.

It divides society into artificial groups based on caste rather than merit.

It encourages unity among different castes in the political domain.

It promotes economic equality among different castes.

Question ID : 4410091651089
Option 1 ID : 4410096520468
Option 2 ID : 4410096520466
Option 3 ID : 4410096520467
Option 4 ID : 4410096520469

During the development of personality in children, which aspect is most important to its definition?

Physical academic achievements

Emotional outbursts during play

Behavioral and emotional characteristics

Established peer friendships at school

Question ID : 4410091620664
Option 1 ID : 4410096401462
Option 2 ID : 4410096401464
Option 3 ID : 4410096401461
Option 4 ID : 4410096401463

High dropout rates among SC/ST students than those among other groups indicate a failure to achieve social equality through education. This is due to

- entrenched societal stratification
- reduced sense of nationalism
- lack of curriculum transformation
- emphasis on mother tongue

Question ID : 4410091557200
Option 1 ID : 4410096151326
Option 2 ID : 4410096151327
Option 3 ID : 4410096151325
Option 4 ID : 4410096151328

While developing a lesson plan to address multi-dimensional poverty, which component is most essential for effective learning outcomes?

- Focusing only on textbook completion
- Integrating life skills and agency-building activities
- Separating girls from boys during lessons
- Assigning extra homework to girls

Question ID : 4410091628745
Option 1 ID : 4410096433127
Option 2 ID : 4410096433126
Option 3 ID : 4410096433129
Option 4 ID : 4410096433128

In educational psychology, what does the principle of 'individual differences' mean in childhood growth and development?

- All children reach milestones at the same time.
- Physical and development do not vary among children.
- Each child grows and develops at their own unique rate.
- Children develop only through formal education.

Question ID : 4410091622610
Option 1 ID : 4410096409217
Option 2 ID : 4410096409218
Option 3 ID : 4410096409216
Option 4 ID : 4410096409219

A developmental psychologist observes that an infant gains postural control of the body by being able to coordinate shoulder and elbow movements, and performs precise manipulation using the fingers. This pattern of motor development best illustrates which principle of growth and development?

Proximodistal development principle

Stability in development principle

Cephalocaudal development principle

Continuity of development principle

Question ID : 4410091628555

Option 1 ID : 4410096432374

Option 2 ID : 4410096432377

Option 3 ID : 4410096432375

Option 4 ID : 4410096432376

Which of the following is a major societal challenge in India involving lack of resources?

Preservation of cultural heritage

Unemployment

Water scarcity

Income inequality

Question ID : 4410091627842

Option 1 ID : 4410096429572

Option 2 ID : 4410096429573

Option 3 ID : 4410096429570

Option 4 ID : 4410096429571

Which of the following is an example of an activity for fine motor skill development?

Pushing a shopping cart

Sorting through beads

Pushing a rope

Pushing a cart in a park

Question ID : 4410091648421

Option 1 ID : 4410096509914

Option 2 ID : 4410096509913

Option 3 ID : 4410096509915

Option 4 ID : 4410096509912

of psychology focuses on the study of teaching and learning in educational settings?

Developmental Psychology

Behavioral Psychology

Cognitive Psychology

Psychoanalytic Psychology

Question ID : 4410091611170

Option 1 ID : 4410096363538

Option 2 ID : 4410096363536

Option 3 ID : 4410096363537

Option 4 ID : 4410096363535

Mr. Sharma observes that a group of children in her classroom are at different stages of developing fine motor skills, with some able to write clearly and others struggling to hold a pencil. Which principle of growth and development does this best illustrate?

Continuity and Gradualness

Stability and Directional Patterns

Order and Predictability

Individual Variation and Rates

Question ID : 4410091628660

Option 1 ID : 4410096432787

Option 2 ID : 4410096432786

Option 3 ID : 4410096432789

Option 4 ID : 4410096432788

Dr. S. Radhakrishnan's theory of human development, as viewed by Dr. S. Radhakrishnan, primarily develops in the:

Physical and hearts of people

Social institutions

Material infrastructure

Technical systems

Question ID : 4410091626534

Option 1 ID : 4410096424508

Option 2 ID : 4410096424511

Option 3 ID : 4410096424509

Option 4 ID : 4410096424510

Following was a major recommendation of the Secondary Education Commission (1952–53)?

Establishment of multipurpose secondary schools

Introduction of the Mid-Day Meal Scheme

Realisation of higher education

Introduction of the Common School System

Question ID : 4410091633008

Option 1 ID : 4410096450151

Option 2 ID : 4410096450153

Option 3 ID : 4410096450152

Option 4 ID : 4410096450150

Wherever persistent tension between student sub-groups based on religious or caste differences exists. To apply the objective of peace education, which method should be prioritized?

Imposing strict common rules

Encouraging collective conflict resolution

Separating conflicting student groups

Emphasizing individual merit solely

Question ID : 4410091549704

Option 1 ID : 4410096121515

Option 2 ID : 4410096121517

Option 3 ID : 4410096121516

Option 4 ID : 4410096121518

In a pluralistic and diverse Contemporary Indian Society, how does the process of education within formal education settings contribute to the development of national identity?

It inculcates values and norms through structured interaction

It primarily fosters individual career goals and aspirations

It focuses on developing academic skills through unstructured interaction

It provides only economic opportunities for individuals

Question ID : 4410091678830

Option 1 ID : 4410096623529

Option 2 ID : 4410096623531

Option 3 ID : 4410096623532

Option 4 ID : 4410096623530

significant impacts of the University Education Commission, which represents the Commission's influence on the development of education policy in India?

- Expansion of primary schools in rural areas
- Introduction of the 10+2+3 education system
- Introduction of the National Literacy Mission
- Disbandment of the University Grants Commission

Question ID : 4410091621601
Option 1 ID : 4410096405209
Option 2 ID : 4410096405208
Option 3 ID : 4410096405210
Option 4 ID : 4410096405207

Which of the following is a key purpose of sociology is _____

- Studying customs
- Understanding society
- Organizing events
- Debunking myths

Question ID : 4410091541804
Option 1 ID : 4410096090385
Option 2 ID : 4410096090384
Option 3 ID : 4410096090383
Option 4 ID : 4410096090386

Which of the following is not correct regarding the importance of the lesson plan?

- It enables teachers to utilise the available time properly
- It instils confidence to teachers during teaching
- It makes classroom activities rigid and forced upon students
- It makes teaching systematic and well organised

Question ID : 4410091546686
Option 1 ID : 4410096109624
Option 2 ID : 4410096109626
Option 3 ID : 4410096109625
Option 4 ID : 4410096109623

Multiple sources for comprehensive assessment helps teachers to:

- the need for varied evidence of student performance
- assessment to one fixed method of data collection
- only on a single test for evaluating achievement
- fuller picture of student learning and progress

Question ID : 4410091546782
Option 1 ID : 4410096109998
Option 2 ID : 4410096109999
Option 3 ID : 4410096109997
Option 4 ID : 4410096109996

Which of the following is an iconic cultural figure discussed for understanding the self in Education?

- Mahatma Gandhi
- Jawahar Lal Nehru
- B.R. Ambedkar
- Rabindranath Tagore

Question ID : 4410091629091
Option 1 ID : 4410096434491
Option 2 ID : 4410096434493
Option 3 ID : 4410096434492
Option 4 ID : 4410096434490

Which of the following is NOT the role of a teacher in bringing about change in society?

- Parents are powerful elements in the society who have brought positive change in society
- Teacher is considered as an agent of social change
- Teachers can solve all the social problems existing in the Indian society on their own
- Teacher acts as a role model for change and modernity in the society

Question ID : 4410091571983
Option 1 ID : 4410096208965
Option 2 ID : 4410096208963
Option 3 ID : 4410096208966
Option 4 ID : 4410096208964

What is the difference between language learning and language acquisition?

- Language learning happens naturally, while acquisition is formal
- Language learning is only for children, acquisition is for adults
- Language acquisition is based on imitation, learning is not
- Acquisition is subconscious; learning is conscious

Question ID : 4410091603925
Option 1 ID : 4410096334888
Option 2 ID : 4410096334890
Option 3 ID : 4410096334891
Option 4 ID : 4410096334889

of teaching emphasizes that learners should first be given real, experiences before introducing abstract ideas?

logical to logical

particular to general

known to unknown

concrete to abstract

Question ID : 4410091576579

Option 1 ID : 4410096227129

Option 2 ID : 4410096227130

Option 3 ID : 4410096227127

Option 4 ID : 4410096227128

Lesson planning ensures that teaching is focused and directed towards specific outcomes?

Setting specific objectives of the lesson

Grouping students by ability

Scheduling time for breaks

Using available teaching aids

Question ID : 4410091644879

Option 1 ID : 4410096496050

Option 2 ID : 4410096496052

Option 3 ID : 4410096496053

Option 4 ID : 4410096496051

In different curriculum types, which principle best ensures that curriculum is relevant, inclusive, and adaptable to societal changes?

Activity Principle

Participation Principle

Activity Principle

Participation Principle

Question ID : 4410091624674

Option 1 ID : 4410096417227

Option 2 ID : 4410096417230

Option 3 ID : 4410096417228

Option 4 ID : 4410096417229

Which concept 'rule-governed system' imply about language?

Language is learned without structure.

Language follows grammatical structures.

Language changes randomly.

Language is only spoken.

Question ID : 4410091608362

Option 1 ID : 4410096352366

Option 2 ID : 4410096352365

Option 3 ID : 4410096352364

Option 4 ID : 4410096352367

erves that children who use multiple languages at home
ifferent patterns of early literacy acquisition compared to their
eers. What is the primary reason for this difference, considering the
ilingualism?

more than one language makes children mix up reading skills

n copy literacy habits from friends at school

g less of one language makes literacy develop faster

rom one language can help children learn literacy in another language

Question ID : 4410091629754

Option 1 ID : 4410096437102

Option 2 ID : 4410096437103

Option 3 ID : 4410096437105

Option 4 ID : 4410096437104

rowth during pre-school years is largely supported by:

posure to spoken language

lar-focused instruction

d drill activities

emorization of written words

Question ID : 4410091579938

Option 1 ID : 4410096241065

Option 2 ID : 4410096241068

Option 3 ID : 4410096241067

Option 4 ID : 4410096241066

ng the process for classroom celebration, a facilitator emphasizes
on based on regional resonance. What is the main advantage of this

ng only famous icons are celebrated nationwide

cing student connection by relating to local cultural heritage

ng solely on textbook examples for activities

g celebration to urban educational settings

Question ID : 4410091606235

Option 1 ID : 4410096343965

Option 2 ID : 4410096343964

Option 3 ID : 4410096343966

Option 4 ID : 4410096343967

becomes educationally meaningful when it is followed by:

isolation

reflection

isolation

reflection

Question ID : 4410091635653

Option 1 ID : 4410096460619

Option 2 ID : 4410096460622

Option 3 ID : 4410096460620

Option 4 ID : 4410096460621

Understanding others through observation contribute to self-understanding?

Increases your understanding of yourself.

Leads to isolation.

Highlights the need for self-reflection.

Increases self-awareness.

Question ID : 4410091652766

Option 1 ID : 4410096526661

Option 2 ID : 4410096526663

Option 3 ID : 4410096526664

Option 4 ID : 4410096526662

Key aspect of multilingualism in education?

Use of languages only for reading and writing without speaking or listening

Ability to use and understand multiple languages in different contexts effectively

Encouraged to learn only one language while ignoring all other languages entirely

Replacement of local languages completely with a single global language

Question ID : 4410091542418

Option 1 ID : 4410096092777

Option 2 ID : 4410096092775

Option 3 ID : 4410096092776

Option 4 ID : 4410096092778

When a country celebrates an iconic figure annually, what is a likely outcome for the generation?

View celebrations only as holidays with no meaning

Become uninterested in the figure's legacy

Ignore the values the figure represented

Develop a sense of identity

Question ID : 4410091692487

Option 1 ID : 4410096676030

Option 2 ID : 4410096676029

Option 3 ID : 4410096676031

Option 4 ID : 4410096676028

What is the main goal of teaching mathematics at the primary school level?

- a) to ensure children complete worksheets quickly
- b) to prepare students for high school exams
- c) to ensure students memorize all formulas
- d) to help children develop problem-solving skills

Question ID : 4410091694997
Option 1 ID : 4410096686060
Option 2 ID : 4410096686059
Option 3 ID : 4410096686058
Option 4 ID : 4410096686057

Which of the following is not correct related to the content of Maxims?

- a) It is related to synthesis
- b) It is related to complex
- c) It is related to empirical
- d) It is related to rational

Question ID : 4410091546676
Option 1 ID : 4410096109584
Option 2 ID : 4410096109583
Option 3 ID : 4410096109585
Option 4 ID : 4410096109586

How do constructivist approaches to pedagogy differ from traditional lectures?

- a) They emphasize learner engagement and knowledge construction.
- b) They provide opportunities for practical application of theoretical concepts.
- c) They encourage collaborative learning among students.
- d) They focus solely on the teacher's understanding and explanation of the topic.

Question ID : 4410091678968
Option 1 ID : 4410096624081
Option 2 ID : 4410096624084
Option 3 ID : 4410096624083
Option 4 ID : 4410096624082

ces that students from similar backgrounds tend to form their own
ling others, leading to some students feeling anxious and
hich group behavior patterns are most responsible for this

ormation and leadership patterns

s and competitive patterns

mity and social loafing

ative and emotional patterns

Question ID : 4410091683196

Option 1 ID : 4410096639817

Option 2 ID : 4410096639814

Option 3 ID : 4410096639816

Option 4 ID : 4410096639815

use different-sized cubes to measure the same box, which
ccur?

bes will change shape

x will look bigger

swers will be different for each student

rk will become faster

Question ID : 4410091608582

Option 1 ID : 4410096353251

Option 2 ID : 4410096353249

Option 3 ID : 4410096353248

Option 4 ID : 4410096353250

skill for developing a vision of education?

ion

on

tive thinking

ization

Question ID : 4410091631419

Option 1 ID : 4410096443899

Option 2 ID : 4410096443898

Option 3 ID : 4410096443896

Option 4 ID : 4410096443897

Following is a characteristic described by students as making a
teacher effective?

- to class prepared
- reading academic articles
- attending prestigious universities
- enforcing strict classroom rules

Question ID : 4410091604342
Option 1 ID : 4410096336542
Option 2 ID : 4410096336543
Option 3 ID : 4410096336545
Option 4 ID : 4410096336544

Which logical skill is most essential for a good facilitator to understand
students?

- listening and empathy
- content delivery skills
- rule enforcement only
- mechanical repetition methods

Question ID : 4410091604510
Option 1 ID : 4410096337212
Option 2 ID : 4410096337214
Option 3 ID : 4410096337213
Option 4 ID : 4410096337215

How do school leaders promote quality education by:

- involving teachers and student learning
- centralizing all decision making
- reporting only examination results
- delegating shared responsibility

Question ID : 4410091602298
Option 1 ID : 4410096328767
Option 2 ID : 4410096328768
Option 3 ID : 4410096328766
Option 4 ID : 4410096328769

At an event, a teacher encourages students to engage in discussions on national values and societal issues. How does this support the vision promoted by NEP 2020?

It restricts students to passive listening without engagement.

It promotes holistic development and critical thinking through active participation.

It emphasizes rote memorization of historical facts for exam purposes.

It encourages open dialogue about societal challenges in the classroom.

Question ID : 4410091607570

Option 1 ID : 4410096349250

Option 2 ID : 4410096349248

Option 3 ID : 4410096349249

Option 4 ID : 4410096349251

Which play is most effective in fostering children's ability to understand and negotiate rules within a group setting?

Formal play

Dramatic play

Active play

Free play

Question ID : 4410091609848

Option 1 ID : 4410096358306

Option 2 ID : 4410096358304

Option 3 ID : 4410096358305

Option 4 ID : 4410096358307

In the context of classical conditioning, what role does a bell play when it is paired with food to make a dog salivate?

An unconditioned response

An unconditioned stimulus

A conditioned stimulus

An unconditioned stimulus

Question ID : 4410091679079

Option 1 ID : 4410096624524

Option 2 ID : 4410096624523

Option 3 ID : 4410096624522

Option 4 ID : 4410096624521

Following defence mechanisms is MOST likely to manifest as
one's own unacceptable impulses onto another person?

Projection

Denial

Displacement

Sublimation

Question ID : 4410091572417

Option 1 ID : 4410096210627

Option 2 ID : 4410096210624

Option 3 ID : 4410096210625

Option 4 ID : 4410096210626

Which humanistic philosophy of education, which core emotional
intelligence is essential for a teacher to function successfully as a learning facilitator?

Emotional Clarity

Self-Mastery

Empathy

Discipline

Question ID : 4410091550800

Option 1 ID : 4410096125486

Option 2 ID : 4410096125483

Option 3 ID : 4410096125484

Option 4 ID : 4410096125485

Which logical attribute empowers a teacher-facilitator to be consistently
objective while managing diverse student needs?

Classroom management

Emotional clarity

Empathy

Subject proficiency

Question ID : 4410091550804

Option 1 ID : 4410096125502

Option 2 ID : 4410096125501

Option 3 ID : 4410096125500

Option 4 ID : 4410096125499

Students are asked to listen to an audio story and later identify new words they have not yet used in speech or writing. Which vocabulary type is primarily engaged with?

- Logical knowledge of word roots
- Receptive vocabulary through receptive listening activities
- Linguistic awareness through translation
- Productive vocabulary via productive tasks

Question ID : 4410091613389
Option 1 ID : 4410096372393
Option 2 ID : 4410096372390
Option 3 ID : 4410096372392
Option 4 ID : 4410096372391

During the preoperational stage, which of the following is a key cognitive ability?

- Object permanence and linking numbers to objects
- Abstract reasoning and hypothesis testing
- Symbolic thought and overgeneralization of language
- Classifying objects by categories and logical order

Question ID : 4410091572395
Option 1 ID : 4410096210565
Option 2 ID : 4410096210564
Option 3 ID : 4410096210566
Option 4 ID : 4410096210567

Which of the following can accurately use a wide range of words while speaking and demonstrating which aspect of vocabulary knowledge, considering both receptive and productive vocabulary?

- Receptive vocabulary
- Productive vocabulary
- Receptive and productive vocabulary
- Contextual vocabulary

Question ID : 4410091679062
Option 1 ID : 4410096624456
Option 2 ID : 4410096624453
Option 3 ID : 4410096624454
Option 4 ID : 4410096624455

Which of the following sentences uses correct subject-verb agreement?

- enjoys the movie every weekend
- joy the movie every weekends
- njoy the movie every weekend
- joying the movie every weekend

Question ID : 4410091621220
Option 1 ID : 4410096403686
Option 2 ID : 4410096403688
Option 3 ID : 4410096403687
Option 4 ID : 4410096403685

In a classroom, a student confidently explains the concept of 'pattern' and applies it while solving problems. What does this demonstrate about the student's vocabulary knowledge?

- The student is unaware of the term 'pattern'.
- The student has only passive vocabulary for 'pattern'.
- The term 'pattern' is part of their active vocabulary.
- The student is guessing the term's meaning.

Question ID : 4410091683614
Option 1 ID : 4410096641384
Option 2 ID : 4410096641382
Option 3 ID : 4410096641383
Option 4 ID : 4410096641385

A principal reviews teaching, student records, teacher surveys, and student performance to judge a school's performance. Which method of measuring school performance is this?

- Relying only on the school's physical facilities
- Relying solely on teacher attendance data
- Quantitative-based evaluation
- Qualitative-dimensional evaluation

Question ID : 4410091548502
Option 1 ID : 4410096116704
Option 2 ID : 4410096116707
Option 3 ID : 4410096116706
Option 4 ID : 4410096116705

Which method best applies both trial and error and classical conditioning to learning?

- Ignoring errors without explanation or feedback
- Only repetition without hands-on practice
- Encouraging students to try solutions with positive feedback
- Learning only on theory without student action

Question ID : 4410091638600
Option 1 ID : 4410096472079
Option 2 ID : 4410096472080
Option 3 ID : 4410096472078
Option 4 ID : 4410096472081

Which method best integrates the concept of measurement units with other topics in mathematics lessons?

- Learning only on oral explanations without activities
- Only textbook exercises for measurement
- Hands-on activities with standard units
- Learning only on memorization of measurement facts

Question ID : 4410091638590
Option 1 ID : 4410096472041
Option 2 ID : 4410096472038
Option 3 ID : 4410096472039
Option 4 ID : 4410096472040

What is most important when conceiving a school from scratch?

- Acquiring sports equipment
- Defining core philosophy and goals
- Choosing school uniform colors
- Designing classrooms

Question ID : 4410091619496
Option 1 ID : 4410096396841
Option 2 ID : 4410096396842
Option 3 ID : 4410096396843
Option 4 ID : 4410096396840

peer conferences where students discuss each other's writing
ts that focus on ideas and organization. Which key skill is primarily
ugh this method?

reading fluency

ization of grammar rules

riting speed

l thinking and evaluation

Question ID : 4410091617652

Option 1 ID : 4410096389502

Option 2 ID : 4410096389501

Option 3 ID : 4410096389500

Option 4 ID : 4410096389499

in focus of the Grammar Translation method?

iciation

ics

lary

nar rules

Question ID : 4410091634342

Option 1 ID : 4410096455454

Option 2 ID : 4410096455453

Option 3 ID : 4410096455452

Option 4 ID : 4410096455451

ied to design a plan to improve school effectiveness in a low-
trict. Which initial step is most appropriate based on measurement

ng teachers to attend mandatory workshops monthly.

ing and analyzing baseline data on current student outcomes.

ng the number of school days to ease student workload.

enting new technology in all classrooms immediately.

Question ID : 4410091642806

Option 1 ID : 4410096488119

Option 2 ID : 4410096488117

Option 3 ID : 4410096488120

Option 4 ID : 4410096488118

viewing passages in science and social science textbooks. To
tive language learning, what should teachers look for?

- or only one register is used
- or all terms are highly technical
- er language is learner-friendly
- or passages are the longest possible

Question ID : 4410091604780
Option 1 ID : 4410096338287
Option 2 ID : 4410096338286
Option 3 ID : 4410096338284
Option 4 ID : 4410096338285

ts to promote critical thinking using textbooks in an optional
course. Which approach most effectively uses the textbook's role in
arning process?

- sing key definitions in context with examples
- arizing chapters and debating main ideas
- ase studies for analysis and reflection
- ng exercises to solve real-world problems

Question ID : 4410091623998
Option 1 ID : 4410096414573
Option 2 ID : 4410096414574
Option 3 ID : 4410096414572
Option 4 ID : 4410096414575

edagogical purpose of scaling down the class size (to 5–10
lesson duration (to approximately 6 minutes) in the Microteaching
achieve:

- ed content coverage
- strative efficiency
- ificiation of complexity
- iate data analysis

Question ID : 4410091558856
Option 1 ID : 4410096157812
Option 2 ID : 4410096157809
Option 3 ID : 4410096157811
Option 4 ID : 4410096157810

ies to model the water cycle for her class using minimal resources.
:h best demonstrates the use of low-cost materials as described in

- ating printed diagrams of the water cycle for students to memorize
- a plastic bottle and some water to create a simple water cycle model
- g an electronic water cycle simulator from a nearby science center
- ing students to write an essay about the water cycle without any demonstration

Question ID : 4410091617228
Option 1 ID : 4410096387813
Option 2 ID : 4410096387811
Option 3 ID : 4410096387812
Option 4 ID : 4410096387814

: bottle caps and stones to teach counting. These materials are:

- / available concrete learning resources
- ised symbolic instructional representations
- ct numerical reinforcement tools
- rdized manipulative assessment devices

Question ID : 4410091570033
Option 1 ID : 4410096201133
Option 2 ID : 4410096201134
Option 3 ID : 4410096201135
Option 4 ID : 4410096201136

influence of Liberalization, Privatization, Globalization dilutes
ms via what specific quality erosion process?

- ned access without commercialization risks
- entation compartmentalizing knowledge silos
- :ed social ethos integration universally
- ehensive unification of all learning domains

Question ID : 4410091564555
Option 1 ID : 4410096179797
Option 2 ID : 4410096179800
Option 3 ID : 4410096179798
Option 4 ID : 4410096179799

'stand for in English language teaching?

- ted Curriculum Theory
- iation and Communication Technology
- tional Classroom Tool
- tive Communication Training

Question ID : 4410091636094
Option 1 ID : 4410096462340
Option 2 ID : 4410096462339
Option 3 ID : 4410096462337
Option 4 ID : 4410096462338

Policy on Education (1986) highlights the need to nurture what from an early age across all sections of society?

Level of competition

Need for economic growth

Focus on technology

Awareness of the environment

Question ID : 4410091602499

Option 1 ID : 4410096329572

Option 2 ID : 4410096329573

Option 3 ID : 4410096329571

Option 4 ID : 4410096329570

The Government of India is evaluating the rise of private, for-profit colleges since since many such colleges offer quick employment-oriented courses at high fees. Based on the LPG reforms' impact, which underlying factor is most relevant for her to address to ensure equitable educational

Global homogenization from global curricula

Shift in research focus in institutions

Increased fiscal deficit from public spending

Widening inequality due to costly fees

Question ID : 4410091618644

Option 1 ID : 4410096393447

Option 2 ID : 4410096393450

Option 3 ID : 4410096393449

Option 4 ID : 4410096393448

Students are instructed to construct simple compost bins to observe the decomposition of plant material over time. Which curriculum concept and approach are primarily being

Emphasized: hands-on inquiry and observation

Classification of sources

Application of concepts; mapping house designs

Predicting migration patterns

Question ID : 4410091633046

Option 1 ID : 4410096450302

Option 2 ID : 4410096450303

Option 3 ID : 4410096450304

Option 4 ID : 4410096450305

Factors to students influencing the practices of the school leader
influence from the leader?

Direct effect

Indirect effect

Mediated effect

Concurrent effect

Question ID : 4410091609145
Option 1 ID : 4410096355498
Option 2 ID : 4410096355497
Option 3 ID : 4410096355499
Option 4 ID : 4410096355496

Primary purpose of lesson planning in pedagogy?

Use textbooks

Organize teaching activities

Prepare teachers

Assess students

Question ID : 4410091636436
Option 1 ID : 4410096463643
Option 2 ID : 4410096463641
Option 3 ID : 4410096463644
Option 4 ID : 4410096463642

Allowing is a primary principle of lesson planning?

Meeting student needs

Focusing only on assessment

Meeting objectives

Choosing activity selection

Question ID : 4410091687449
Option 1 ID : 4410096656584
Option 2 ID : 4410096656585
Option 3 ID : 4410096656582
Option 4 ID : 4410096656583

Which best describes the goal of equality in social science

Encouraging competition among students

Focusing only on academic achievement

Ensuring everyone has the same opportunities

Providing special treatment to certain groups

Question ID : 4410091627634
Option 1 ID : 4410096428747
Option 2 ID : 4410096428748
Option 3 ID : 4410096428746
Option 4 ID : 4410096428745

of Primary Education, managing a shift in school culture, which with the integration method of conflict resolution when addressing violence?

contingent rewards.

create a circular response.

enforce bureaucratic rules.

seek a middle-ground compromise.

Question ID : 4410091635129

Option 1 ID : 4410096458557

Option 2 ID : 4410096458555

Option 3 ID : 4410096458556

Option 4 ID : 4410096458558

How do economic conditions influence economic development in society?

highlighting the need for vocational and technical training

developing skilled human resources and employability

concentrating wealth and opportunities among elites

separating education from labour market demands

Question ID : 4410091603095

Option 1 ID : 4410096331576

Option 2 ID : 4410096331577

Option 3 ID : 4410096331578

Option 4 ID : 4410096331579

Which criticism of the Grammar Translation Method highlights its effect on the competence in English learners?

focuses on repetitive written translations only.

uses traditional literary texts for teaching.

focuses mainly on grammatical accuracy tests.

neglects speaking and listening skills development.

Question ID : 4410091659717

Option 1 ID : 4410096552990

Option 2 ID : 4410096552992

Option 3 ID : 4410096552991

Option 4 ID : 4410096552989

room where science kits are not used. What is a likely for students' learning?

- ts will develop better scientific skills
- ed dependence on laboratory experiments
- completion of the science syllabus
- ed hands-on understanding of scientific concepts

Question ID : 4410091670060
Option 1 ID : 4410096591069
Option 2 ID : 4410096591070
Option 3 ID : 4410096591071
Option 4 ID : 4410096591068

al shift in teaching Mathematics moves away from the traditional g on:

- ve reasoning
- n solving
- tual knowledge
- arning and drill

Question ID : 4410091551399
Option 1 ID : 4410096127960
Option 2 ID : 4410096127962
Option 3 ID : 4410096127959
Option 4 ID : 4410096127961

strates delayed speech development and struggles with social /hich assessment tool is most suitable for identifying potential I disabilities in this case?

- general intelligence test exclusively
- cting a physical fitness evaluation alone
- istering a standardized developmental screening checklist
- ting specific subject performance only

Question ID : 4410091617411
Option 1 ID : 4410096388543
Option 2 ID : 4410096388545
Option 3 ID : 4410096388546
Option 4 ID : 4410096388544

replaces IQ-achievement gap criteria by assessing learner
d on instructional failure?

ilar assessment

me analysis

nse to intervention

al brain damage

Question ID : 4410091560389

Option 1 ID : 4410096163699

Option 2 ID : 4410096163698

Option 3 ID : 4410096163700

Option 4 ID : 4410096163701

allowing is not an importance of reading skills?

aging analytical and reflective thinking processes

ing the ability to access knowledge and information

ting the interpretation of written materials effectively

g learners engage with a variety of texts meaningfully

Question ID : 4410091548258

Option 1 ID : 4410096115748

Option 2 ID : 4410096115747

Option 3 ID : 4410096115745

Option 4 ID : 4410096115746

to revise its policies to support transgender and non-binary
sh policy change would most effectively foster an inclusive

: separately designed restrooms and uniforms for transgender students only

ng counseling while retaining existing uniform and restroom restrictions

ng students to choose uniforms and restroom as per their gender identity

ting parental approval for any student-initiated identity-related adjustments

Question ID : 4410091617364

Option 1 ID : 4410096388357

Option 2 ID : 4410096388358

Option 3 ID : 4410096388356

Option 4 ID : 4410096388355

lia refuses to admit children from a particular minority community.
Exclusion is this?

nic exclusion

al exclusion

nic exclusion

exclusion

Question ID : 4410091687996
Option 1 ID : 4410096658772
Option 2 ID : 4410096658771
Option 3 ID : 4410096658773
Option 4 ID : 4410096658770

urages students to ask questions about why it rains more in some
! does this teaching strategy highlight?

e as unchanging facts

e as guessing answers

e as inquiry driven knowledge

e as only memorizing textbooks

Question ID : 4410091693006
Option 1 ID : 4410096678133
Option 2 ID : 4410096678136
Option 3 ID : 4410096678134
Option 4 ID : 4410096678135

uates students through oral discussion, written tasks, and
otes. This represents:

evaluative classroom

only approach

le assessment techniques

e-format assessment

Question ID : 4410091570229
Option 1 ID : 4410096201911
Option 2 ID : 4410096201912
Option 3 ID : 4410096201910
Option 4 ID : 4410096201909

1 mathematics supports joyful learning because it:

learner creativity and imagination

res dependence on rote memorisation methods

tes rigid adherence to formal algorithms

es fear and anxiety associated with mathematics

Question ID : 4410091588356
Option 1 ID : 4410096274154
Option 2 ID : 4410096274151
Option 3 ID : 4410096274152
Option 4 ID : 4410096274153

nts to improve its English program by systematically collecting
aking inferences, and deciding on modifications, which process is
I?

m evaluation

t assessment

r recruitment

i planning

Question ID : 4410091606045

Option 1 ID : 4410096343212

Option 2 ID : 4410096343214

Option 3 ID : 4410096343215

Option 4 ID : 4410096343213

tification in education primarily refers to the process of:

ting learners into special schools

ining intelligence through single tests

nising functional difficulties affecting learning

g learners based only on medical diagnoses

Question ID : 4410091589285

Option 1 ID : 4410096277733

Option 2 ID : 4410096277735

Option 3 ID : 4410096277734

Option 4 ID : 4410096277732

ation views diversity among learners mainly as a:

om difficulty

ilum limitation

ng opportunity

strative burden

Question ID : 4410091704054

Option 1 ID : 4410096721291

Option 2 ID : 4410096721293

Option 3 ID : 4410096721290

Option 4 ID : 4410096721292

When designing a mathematics curriculum for graduate students in numbers. Which approach best fosters deep understanding of the relationships among natural, integer, rational, real, and complex

- including historical context of numbers
- using real-life number set problems
- providing examples and counterexamples
- highlighting patterns and relationships

Question ID : 4410091626510
Option 1 ID : 4410096424412
Option 2 ID : 4410096424413
Option 3 ID : 4410096424415
Option 4 ID : 4410096424414

The role of an Eco-Club relates most directly to developing positive attitudes toward the environment?

- enhancing mathematical skills through environmental statistics
- promoting awareness and sensitivity about various environmental issues
- teaching foreign languages to communicate global issues
- improving debating techniques on current events

Question ID : 4410091662896
Option 1 ID : 4410096564890
Option 2 ID : 4410096564889
Option 3 ID : 4410096564892
Option 4 ID : 4410096564891

Which teaching aids would be most effective for a language lesson on a diverse classroom?

- Physical maps, compasses, and weather journals
- Mathematical charts, number blocks, and measuring tapes
- Scientific apparatus, lab coats, and periodic tables
- Audio recordings, picture cards, and role-play props

Question ID : 4410091641194
Option 1 ID : 4410096481932
Option 2 ID : 4410096481930
Option 3 ID : 4410096481931
Option 4 ID : 4410096481929

Professional development workshop, educators are debating the nature of scientific concepts. As a science teacher, which argument would you use to clarify the nature of scientific concepts?

Scientific concepts are created to fit existing technology

Scientific concepts are personal beliefs of scientists

Scientific concepts are universally agreed and static

Scientific concepts evolve with new evidence and reinterpretation

Question ID : 4410091633876

Option 1 ID : 4410096453596

Option 2 ID : 4410096453595

Option 3 ID : 4410096453594

Option 4 ID : 4410096453597

Which of the following describes numbers that can be written as fractions?

Integers

Rational numbers

Real numbers

Irrational numbers

Question ID : 4410091635711

Option 1 ID : 4410096460831

Option 2 ID : 4410096460833

Option 3 ID : 4410096460832

Option 4 ID : 4410096460834

Which disability affects a person's ability to understand numbers and mathematical symbols?

Color blindness

Deafness

Phonetic awareness

Specific learning disability

Question ID : 4410091635654

Option 1 ID : 4410096460623

Option 2 ID : 4410096460625

Option 3 ID : 4410096460626

Option 4 ID : 4410096460624

Which of the following is an example of inclusion in Indian schools?

Creating separate classrooms only for high-performing students

Integrating children from marginalized communities into regular classes

Encouraging participation of children with disabilities in activities

Introducing only mainstream cultural content through textbooks

Question ID : 4410091551123

Option 1 ID : 4410096126731

Option 2 ID : 4410096126733

Option 3 ID : 4410096126732

Option 4 ID : 4410096126734

