



GOVT. OF NCT OF DELHI
Delhi Subordinate Services Selection Board
FC-18, Institutional Area, Karkardooma, Delhi – 110092.
www.dsssb.delhigovt.nic.in

Participant ID	27111111111111111111
Participant Name	XXXXXXXXXX
Test Center Name	iON Digital Zone iDZ 2 Sector 62
Test Date	19/02/2026
Test Time	9:00 AM - 11:00 AM
Subject	Assistant Teacher Primary

Section : General Intelligence and Reasoning Ability

Q.1 Refer to the following letter series and answer the question. (Counting to be done from left to right only)
(Left) F W N V N F A S A C P A H H W X J J Z (Right)
How many such vowels are there each of which is immediately preceded by a consonant and also immediately followed by a consonant?

- Ans
- 1. 1
 - 2. 2
 - 3. 3
 - 4. 4

Question ID : 441009779770
Option 1 ID : 4410093073083
Option 2 ID : 4410093073084
Option 3 ID : 4410093073085
Option 4 ID : 4410093073086

Q.2 Seven boxes, F, I, L, T, E, R and S, are kept one over the other but not necessarily in the same order. Only S is kept above I. Only F is kept between I and E. Only L is kept below T.
How many boxes are kept between R and L?

- Ans
- 1. One
 - 2. Four
 - 3. Three
 - 4. Two

Question ID : 4410091518831
Option 1 ID : 4410095998602
Option 2 ID : 4410095998605
Option 3 ID : 4410095998604
Option 4 ID : 4410095998603

Adda247

Test Prime

ALL EXAMS, ONE SUBSCRIPTION



1,00,000+
Mock Tests



**Personalised
Report Card**



**Unlimited
Re-Attempt**



600+
Exam Covered



25,000+ Previous
Year Papers

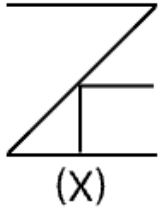


500%
Refund



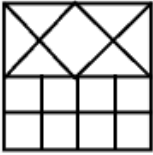
ATTEMPT FREE MOCK NOW

Q.3 Select the option figure in which the given figure (X) is embedded as its part (rotation is NOT allowed).

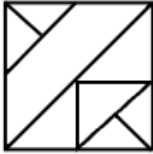


Ans

1.



2.



3.



4.



Question ID : 4410091377927
 Option 1 ID : 4410095519100
 Option 2 ID : 4410095519098
 Option 3 ID : 4410095519099
 Option 4 ID : 4410095519097

Q.4 Faisal ranked 22nd from the top and 20th from the bottom in his class. How many students are there in his class?

- Ans 1. 40
 2. 39
 3. 38
 4. 41

Question ID : 4410091518819
 Option 1 ID : 4410095998556
 Option 2 ID : 4410095998555
 Option 3 ID : 4410095998554
 Option 4 ID : 4410095998557

Q.5 In a row of people all facing north, Piyush is 11th from the right end. Krishna is 20th from the right end. Krishna is exactly between Piyush and Jackie. If Jackie is 4th from the left end of the line, how many people are there in the row?

- Ans
- 1. 30
 - 2. 33
 - 3. 31
 - 4. 32

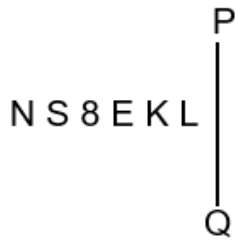
Question ID : 4410091619667
Option 1 ID : 4410096397524
Option 2 ID : 4410096397527
Option 3 ID : 4410096397525
Option 4 ID : 4410096397526

Q.6 If 'A' stands for '+', 'B' stands for 'x', 'C' stands for '+' and 'D' stands for '-', what will come in place of question mark '?' in the following equation?
 $15 B 3 D 6 A 3 C 7 = ?$

- Ans
- 1. 50
 - 2. 60
 - 3. 55
 - 4. 45

Question ID : 4410091606210
Option 1 ID : 4410096343865
Option 2 ID : 4410096343867
Option 3 ID : 4410096343866
Option 4 ID : 4410096343864

Q.7 Select the correct mirror image of the given combination when the mirror is placed at PQ as shown below.



- Ans
- 1. J K 8 E 2 N
 - 2. N 2 8 E K J
 - 3. L K E 8 S N
 - 4. J K E 8 2 N

Question ID : 44100971756
 Option 1 ID : 441009285408
 Option 2 ID : 441009285406
 Option 3 ID : 441009285405
 Option 4 ID : 441009285407

Q.8 Based on the English alphabetical order, three of the following four are alike in a certain way and thus form a group. Which is the one that does not belong to that group?
 (Note: The odd one out is not based on the number of consonants/vowels or their position in the letter cluster)¹¹⁵⁸⁸

- Ans
- 1. EGJ
 - 2. LNQ
 - 3. QST
 - 4. TVY

Question ID : 441009785450
 Option 1 ID : 4410093095805
 Option 2 ID : 4410093095804
 Option 3 ID : 4410093095806
 Option 4 ID : 4410093095803

Q.9 Based on the English alphabetical order, three of the following four letter-cluster pairs are alike in a certain way and thus form a group. Which is the one that does not belong to that group?
(Note: The odd one out is not based on the number of consonants/vowels or their position in the letter-cluster.)

- Ans
- 1. RK - LE
 - 2. UN - OH
 - 3. OH - IB
 - 4. QJ - LP

Question ID : 441009811353
Option 1 ID : 4410093199536
Option 2 ID : 4410093199535
Option 3 ID : 4410093199537
Option 4 ID : 4410093199538

Q.10 What should come in place of '?' in the given series?

4 ? 32 95 284 851

- Ans
- 1. 8
 - 2. 19
 - 3. 24
 - 4. 11

Question ID : 4410091528146
Option 1 ID : 4410096035777
Option 2 ID : 4410096035779
Option 3 ID : 4410096035780
Option 4 ID : 4410096035778

Q.11 Below are given two sets of numbers. In each set of numbers, a certain mathematical operation on the first number results in the second number. Similarly, certain mathematical operation on the second number results in the third number and so on. Which of the given options follows the same set of operations as in the question?
(NOTE – A two/three-digit number cannot be broken into individual digits for operations e.g. if 37 is followed by 10, the operation cannot be 3+7 as a two-digit number cannot be broken into individual digits)

21 - 29 - 232 - 225
18 - 26 - 208 - 2012394

- Ans
- 1. 17 - 25 - 250 - 244
 - 2. 46 - 53 - 371 - 364
 - 3. 39 - 47 - 376 - 369
 - 4. 26 - 35 - 280 - 274

Question ID : 441009528748
Option 1 ID : 4410092070399
Option 2 ID : 4410092070398
Option 3 ID : 4410092070396
Option 4 ID : 4410092070397

Q.12 Refer to the following letter, symbol series and answer the question. Counting to be done from left to right only.
(Left) £ B % K H & @ & J © J € O X \$ N \$ J @ & P O (Right)
How many such letters are there each of which is immediately preceded by a letter and also immediately followed by a symbol?

- Ans
- 1. 4
 - 2. 1
 - 3. 3
 - 4. 2

Question ID : 441009795660
Option 1 ID : 4410093136642
Option 2 ID : 4410093136641
Option 3 ID : 4410093136640
Option 4 ID : 4410093136639

Q.13 This question is based on the five, three-digit numbers given below.
(Left) 287 846 241 726 468 (Right)
(Example: 697 – First digit = 6, second digit = 9 and third digit = 7)
(NOTE : All operations to be done from left to right.)

What will be the resultant if the second digit of the second-highest number is multiplied by the second digit of the third-lowest number?

- Ans
- 1. 21
 - 2. 12
 - 3. 22
 - 4. 10

Question ID : 441009794347
Option 1 ID : 4410093131389
Option 2 ID : 4410093131388
Option 3 ID : 4410093131390
Option 4 ID : 4410093131387

Q.14 In a certain code language, 'HARM' is coded as '4871' and 'RAMP' is coded as '8137'.
What is the code for 'P' in the given code language?

- Ans
- 1. 3
 - 2. 1
 - 3. 4
 - 4. 8

Question ID : 4410091518942
Option 1 ID : 4410095999022
Option 2 ID : 4410095999024
Option 3 ID : 4410095999023
Option 4 ID : 4410095999025

Q.15 Each vowel in the word AWAITING is changed to the letter immediately following it in the English alphabetical order and each consonant is changed to the letter immediately preceding it in the English alphabetical order. How many letters will appear exactly twice in the new group of letters thus formed?

- Ans
- 1. Three
 - 2. Two
 - 3. Four
 - 4. One

Question ID : 441009216477
Option 1 ID : 441009849949
Option 2 ID : 441009849948
Option 3 ID : 441009849950
Option 4 ID : 441009849947

Q.16 S is the brother of A. A is the father of Y. B is the father of W. W is the son of Y. How is S related to W?

- Ans
- 1. Mother's father's father
 - 2. Mother's father's brother
 - 3. Mother's father
 - 4. Mother's brother

Question ID : 4410091614486
Option 1 ID : 4410096376762
Option 2 ID : 4410096376761
Option 3 ID : 4410096376763
Option 4 ID : 4410096376764

Q.17 HIKH is related to LMOL in a certain way based on the English alphabetical order. In the same way, DEGD is related to HIKH. To which of the following is ABDA related, following the same logic?5094

- Ans
- 1. EFHE
 - 2. EEGE
 - 3. EFGE
 - 4. EGGO

Question ID : 441009779057
Option 1 ID : 4410093070231
Option 2 ID : 4410093070233
Option 3 ID : 4410093070234
Option 4 ID : 4410093070232

Q.18 Which of the following letter-number clusters will replace the question mark (?) in the given series to make it logically complete?

GHJ51 , JKM67 , MNP83 , PQS99 , ?

- Ans
- 1. KTV115
 - 2. STV115
 - 3. STU115
 - 4. SIV115

Question ID : 4410091519086
 Option 1 ID : 4410095999609
 Option 2 ID : 4410095999606
 Option 3 ID : 4410095999607
 Option 4 ID : 4410095999608

Q.19 Each of the digits in the number 46812597 is arranged in ascending order from left to right. What will be the sum of the digits which are third from the left and fourth from the right in the number thus formed?

- Ans
- 1. 11
 - 2. 12
 - 3. 13
 - 4. 10

Question ID : 4410091656328
 Option 1 ID : 4410096540268
 Option 2 ID : 4410096540269
 Option 3 ID : 4410096540270
 Option 4 ID : 4410096540267

Q.20 Seven people, R, O, A, M, I, N and G, are sitting in a row, facing north. Only two people sit to the left of N. Only three people sit between N and A. Only one person sits between A and R. O sits to the immediate left of I. G is not an immediate neighbor of A. How many people sit to the right of M?

- Ans
- 1. Two
 - 2. Three
 - 3. Four
 - 4. One

Question ID : 4410091518809
 Option 1 ID : 4410095998519
 Option 2 ID : 4410095998520
 Option 3 ID : 4410095998521
 Option 4 ID : 4410095998518

Q.1 Which of the following CORRECTLY illustrates the long-term constitutional consequence of the Kesavananda Bharati judgment in the context of parliamentary attempts at asserting supremacy?

- Ans
- 1. The constitutional review exercise post-1980 successfully removed all restrictions on amending fundamental rights
 - 2. The 42nd Amendment annulled the basic structure doctrine, making Parliament sovereign in all constitutional matters.
 - 3. Despite the 42nd Amendment, the Supreme Court in Minerva Mills reaffirmed the basic structure doctrine, limiting constitutional amendments.
 - 4. The Minerva Mills judgment overturned Kesavananda and declared the Preamble non-justiciable.

Question ID : 441009671841
Option 1 ID : 4410092641461
Option 2 ID : 4410092641458
Option 3 ID : 4410092641460
Option 4 ID : 4410092641459

Q.2 The Governor of a State shall be appointed by the _____ by warrant under his hand and seal.

- Ans
- 1. Prime Minister of India
 - 2. Chief Justice of India
 - 3. Respective State's Chief Minister
 - 4. President of India

Question ID : 441009672144
Option 1 ID : 4410092642670
Option 2 ID : 4410092642673
Option 3 ID : 4410092642672
Option 4 ID : 4410092642671

Q.3 Which nation served as the host for COP30 Climate Summit in 2025?

- Ans
- 1. Germany
 - 2. India
 - 3. Brazil
 - 4. Canada

Question ID : 4410091556431
Option 1 ID : 4410096148295
Option 2 ID : 4410096148294
Option 3 ID : 4410096148297
Option 4 ID : 4410096148296

Q.4 The Great Indian Plains were primarily formed by which geological process?

- Ans
- 1. Glacial erosion
 - 2. Volcanic eruption
 - 3. Sediment deposition
 - 4. Tectonic uplift

Question ID : 441009321799
Option 1 ID : 4410091253398
Option 2 ID : 4410091253395
Option 3 ID : 4410091253397
Option 4 ID : 4410091253396

Q.5 Article 359A of the Indian constitution is related to which of the following states?

- Ans
- 1. Meghalaya
 - 2. Punjab
 - 3. Jammu & Kashmir
 - 4. Assam

Question ID : 441009327805
Option 1 ID : 4410091277679
Option 2 ID : 4410091277680
Option 3 ID : 4410091277681
Option 4 ID : 4410091277678

Q.6 Which AI tool was launched in November 2025 by Indian researchers to analyze cancer?

- Ans
- 1. MedAI
 - 2. GeneTrack
 - 3. OncoMark
 - 4. BioScan

Question ID : 4410091563041
Option 1 ID : 4410096173730
Option 2 ID : 4410096173729
Option 3 ID : 4410096173728
Option 4 ID : 4410096173727

Q.7 Which monument, built by Shah Jahan in memory of his wife Mumtaz Mahal, is a UNESCO World Heritage Site?

- Ans
- 1. Red Fort
 - 2. Taj Mahal
 - 3. Qutub Minar
 - 4. Humayun's Tomb

Question ID : 441009749042
Option 1 ID : 4410092949989
Option 2 ID : 4410092949990
Option 3 ID : 4410092949988
Option 4 ID : 4410092949991

Q.8 What was the initial aim of the Indian National Congress when it was founded in 1885?

- Ans
- 1. Religious unity
 - 2. Full independence
 - 3. Armed rebellion
 - 4. Limited reforms

Question ID : 441009876101
Option 1 ID : 4410093458021
Option 2 ID : 4410093458019
Option 3 ID : 4410093458022
Option 4 ID : 4410093458020

Q.9 The missile tested by DRDO & Indian Navy on 27th February, 2025, from Chandipur was:

- Ans
- 1. NASM-SR naval anti-ship missile
 - 2. BrahMos II
 - 3. Pralay tactical missile
 - 4. Agni-P

Question ID : 441009225146
Option 1 ID : 441009881699
Option 2 ID : 441009881697
Option 3 ID : 441009881698
Option 4 ID : 441009881700

Q.10 What does BPO commonly refer to?

- Ans 1. Business Process Outsourcing
 2. Banking Process Order
 3. Basic Product Outsourcing
 4. Business Private Operations

Question ID : 441009226635
Option 1 ID : 441009887379
Option 2 ID : 441009887378
Option 3 ID : 441009887380
Option 4 ID : 441009887377

Q.11 Which of the following best describes the EOS-05 mission by ISRO?

- Ans 1. An Earth observation satellite for environmental monitoring.
 2. A deep space exploration mission targeting Mars.
 3. A communication satellite for global connectivity.
 4. A satellite designed for space docking experiments.

Question ID : 441009312306
Option 1 ID : 4410091215703
Option 2 ID : 4410091215704
Option 3 ID : 4410091215702
Option 4 ID : 4410091215705

Q.12 Which of the following is NOT a key area of urban development under the Atal Mission for Rejuvenation and Urban Transformation (AMRUT)?

- Ans 1. Non-Motorised Urban Transport
 2. Promotion of transshipment hubs
 3. Sewerage and septage management
 4. Green spaces and parks

Question ID : 4410091457543
Option 1 ID : 4410095758483
Option 2 ID : 4410095758482
Option 3 ID : 4410095758481
Option 4 ID : 4410095758480

Q.13 In April 2025, Klaus Schwab resigned as Chairman of the World Economic Forum after how many years of service in the Geneva-based institution?

- Ans
- 1. 43
 - 2. 59
 - 3. 36
 - 4. 55

Question ID : 441009321062
Option 1 ID : 4410091250514
Option 2 ID : 4410091250516
Option 3 ID : 4410091250513
Option 4 ID : 4410091250515

Q.14 The 'Dumhal' dance is performed by which tribe in Jammu and Kashmir?

- Ans
- 1. Gujjar
 - 2. Bhil
 - 3. Wattal
 - 4. Bakarwal

Question ID : 441009275771
Option 1 ID : 4410091071257
Option 2 ID : 4410091071255
Option 3 ID : 4410091071258
Option 4 ID : 4410091071256

Q.15 Which of the following is a key feature of the tertiary sector in advanced economies?

- Ans
- 1. Overproduction of manufactured goods for export
 - 2. Reliance on large-scale primary industries
 - 3. Growth of highly specialized and knowledge-based services
 - 4. Dominance of low-skilled labor

Question ID : 441009209755
Option 1 ID : 441009824269
Option 2 ID : 441009824266
Option 3 ID : 441009824268
Option 4 ID : 441009824267

Q.16 Who among the following led the anti-partition movement under the moderates?

- Ans
- 1. Bhagat Singh
 - 2. Surendranath Banerjee
 - 3. Jawaharlal Nehru
 - 4. Mahatma Gandhi

Question ID : 441009328857
Option 1 ID : 4410091281840
Option 2 ID : 4410091281839
Option 3 ID : 4410091281841
Option 4 ID : 4410091281838

Q.17 When did the ruler of Iran, Nadir Shah, sacked and plundered the city of Delhi and took away immense amounts of wealth?

- Ans
- 1. 1839 AD
 - 2. 1639 AD
 - 3. 1739 AD
 - 4. 1539 AD

Question ID : 441009102990
Option 1 ID : 441009410011
Option 2 ID : 441009410009
Option 3 ID : 441009410010
Option 4 ID : 441009410008

Q.18 Which natural substance is used to produce litmus?

- Ans
- 1. Algae
 - 2. Bacteria
 - 3. Fungi
 - 4. Lichens

Question ID : 441009513039
Option 1 ID : 4410092007154
Option 2 ID : 4410092007155
Option 3 ID : 4410092007152
Option 4 ID : 4410092007153

Q.19 The last amino acid in a protein sequence is called the _____.

- Ans
- 1. N-terminal
 - 2. Beta-end
 - 3. C-terminal
 - 4. Omega group

Question ID : 441009512778
Option 1 ID : 4410092006241
Option 2 ID : 4410092006240
Option 3 ID : 4410092006242
Option 4 ID : 4410092006243

Q.20 What was the expected outcome of the trade and investment policy reforms of 1991?

- Ans
- 1. Increased adoption of modern technologies
 - 2. Reduced efficiency of local industries
 - 3. Decreased foreign investment
 - 4. Increased trade barriers

Question ID : 441009226689
Option 1 ID : 441009887592
Option 2 ID : 441009887591
Option 3 ID : 441009887593
Option 4 ID : 441009887594

Section : Arithmetical and Numerical Ability

Q.1 A shopkeeper offers two successive discounts of 15% and 20% on an article marked at ₹4,000. What is the final selling price?

- Ans
- 1. ₹3,200
 - 2. ₹2,720
 - 3. ₹2,600
 - 4. ₹2,880

Question ID : 4410091546480
Option 1 ID : 4410096108806
Option 2 ID : 4410096108804
Option 3 ID : 4410096108803
Option 4 ID : 4410096108805

Q.2 The average runs scored by a batsman in 21 matches is 40 runs. In the next 15 matches, the batsman scored an average of 13 runs. Find his average (in runs, rounded off to two decimals) in all the 36 matches.

- Ans
- 1. 30.75
 - 2. 28.75
 - 3. 27.75
 - 4. 29.75

Question ID : 441009894836
Option 1 ID : 4410093533417
Option 2 ID : 4410093533414
Option 3 ID : 4410093533415
Option 4 ID : 4410093533416

Q.3 During the first year the population of a village increased by 8% and in the second year it diminished by 8%. At the end of the second year, its population was 34776. What was the population at the beginning of the first year?

- Ans
- 1. 34200
 - 2. 34000
 - 3. 34900
 - 4. 35000

Question ID : 4410098336
Option 1 ID : 44100933053
Option 2 ID : 44100933052
Option 3 ID : 44100933054
Option 4 ID : 44100933055

Q.4 The diameter of a metallic sphere is 6 cm. It is melted and drawn into a wire with a cross-sectional diameter of 0.2 cm. Find the length (in metres) of the wire.

- Ans
- 1. 0.36
 - 2. 36
 - 3. 3.6
 - 4. 360

Question ID : 441009621026
Option 1 ID : 4410092438236
Option 2 ID : 4410092438238
Option 3 ID : 4410092438237
Option 4 ID : 4410092438239

Q.5 In what ratio (cheaper to dearer) should a grocer mix two varieties of pulses costing ₹18 and ₹22 per kg, respectively, to obtain a mixture worth ₹19.50 per kg?

- Ans
- 1. 5 : 3
 - 2. 4 : 3
 - 3. 2 : 5
 - 4. 3 : 7

Question ID : 441009287268
Option 1 ID : 4410091120031
Option 2 ID : 4410091120032
Option 3 ID : 4410091120033
Option 4 ID : 4410091120034

Q.6 Three cubes with sides in the ratio 2 : 3 : 4 are melted to form a single cylinder whose radius is 6 cm and height is 7 cm. What are the sides of the cubes?

(Given: $\pi = \frac{22}{7}$.)

- Ans
- 1. 2 cm, 3 cm and 4 cm
 - 2. 8 cm, 12 cm and 16 cm
 - 3. 4 cm, 6 cm and 8 cm
 - 4. 6 cm, 9 cm and 12 cm

Question ID : 44100952340
Option 1 ID : 441009208476
Option 2 ID : 441009208478
Option 3 ID : 441009208475
Option 4 ID : 441009208477

Q.7 A group of 5 workers can complete a task in 12 days. After 4 days, 2 more workers join the group. In how many more days will the remaining work be completed?

- Ans
- 1. $5\frac{3}{5}$
 - 2. $5\frac{5}{7}$
 - 3. $7\frac{2}{3}$
 - 4. $5\frac{5}{9}$

Question ID : 44100952118
Option 1 ID : 441009207593
Option 2 ID : 441009207592
Option 3 ID : 441009207594
Option 4 ID : 441009207591

Q.8 A metallic rod is divided into four equal parts. These parts are then joined together to form a square with a side length of 5 m. What is the total length (in m) of the rod?

- Ans
- 1. 32
 - 2. 36
 - 3. 34
 - 4. 38

Question ID : 44100918106
Option 1 ID : 44100972248
Option 2 ID : 44100972249
Option 3 ID : 44100972247
Option 4 ID : 44100972250

Q.9 A shopkeeper sold a book at a loss of 7%. If the selling price had been increased by ₹120, there would have been a gain of 18%. What was the cost price (in ₹) of the book?

- Ans
- 1. 475
 - 2. 490
 - 3. 485
 - 4. 480

Question ID : 441009895076
Option 1 ID : 4410093534375
Option 2 ID : 4410093534377
Option 3 ID : 4410093534376
Option 4 ID : 4410093534374

Q.10 A shopkeeper bought a chair for ₹2,400 and spent ₹100 on its transportation. He sold it for ₹3,000. What is his profit percentage?

- Ans
- 1. 20%
 - 2. 18%
 - 3. 15%
 - 4. 25%

Question ID : 4410091639868
Option 1 ID : 4410096476687
Option 2 ID : 4410096476689
Option 3 ID : 4410096476686
Option 4 ID : 4410096476688

Q.11 What sum (in ₹) will earn a simple interest of ₹1560 in 2 years at 16% per year rate of interest?¹³⁵⁹

- Ans 1. 4875
 2. 9750
 3. 499.2
 4. 2437.5

Question ID : 441009852641
Option 1 ID : 4410093363536
Option 2 ID : 4410093363538
Option 3 ID : 4410093363539
Option 4 ID : 4410093363537

Q.12 Which of the following exactly divides $281 \times 926 \times 2007$?

- Ans 1. 7
 2. 5
 3. 9
 4. 11

Question ID : 44100951528
Option 1 ID : 441009205261
Option 2 ID : 441009205260
Option 3 ID : 441009205262
Option 4 ID : 441009205263

Q.13 The value of $(5 + 2\sqrt{6}) + \frac{1}{(5 - 2\sqrt{6})} - (10 + 4\sqrt{6})$ is:

- Ans 1. 4
 2. 2
 3. 0
 4. 1

Question ID : 4410098259
Option 1 ID : 44100932743
Option 2 ID : 44100932742
Option 3 ID : 44100932740
Option 4 ID : 44100932741

Q.14 A and B can do a piece of work in 12 days and 28 days, respectively. Both work for 3 days and then A goes away. How long (in days) will B take to complete the remaining work?⁴⁰⁴⁰

- Ans 1. 18
 2. 19
 3. 17
 4. 20

Question ID : 441009897353
Option 1 ID : 4410093543482
Option 2 ID : 4410093543483
Option 3 ID : 4410093543484
Option 4 ID : 4410093543485

Q.15 The table given below shows the number of cycles sold by five showr
Study the table and answer the question that follows.

YEAR/SHOWROOM	P	Q	R
2019	360	380	340
2020	320	350	380
2021	410	400	480
2022	480	470	420
2023	520	410	500

Find the number of cycles sold by showroom Q during the years 2020

- Ans 1. 1630
 2. 1720
 3. 1580
 4. 1370

Question ID : 4410095689
Option 1 ID : 44100922536
Option 2 ID : 44100922537
Option 3 ID : 44100922535
Option 4 ID : 44100922534

Q.16 There are three types of drinks in which the ratios of juice to water are 2 : 3, 3 : 7, and 4 : 5. Container M is completely filled with the first type of drink, container N is completely filled with the second type of drink, and container O is completely filled with the third type of drink. If the capacities of these containers are in the ratio 6 : 5 : 4, which container contains the least amount of juice?

Ans 1. N

2. All have equal amount of juice.

3. M

4. O

Question ID : 44100952072

Option 1 ID : 441009207413

Option 2 ID : 441009207415

Option 3 ID : 441009207412

Option 4 ID : 441009207414

Q.17 Two trains of lengths 200 m and 400 m are 150 m apart. They
In how much time (in seconds) will the trains cross each other?

Ans 1. 15

2. 5

3. 10

4. 20

Question ID : 44100920186

Option 1 ID : 44100980475

Option 2 ID : 44100980473

Option 3 ID : 44100980474

Option 4 ID : 44100980476

Q.18 Find the fourth proportional to the number 24, 32 and 42.

Ans 1. 28

2. 42

3. 56

4. 63

Question ID : 4410096013

Option 1 ID : 44100923829

Option 2 ID : 44100923830

Option 3 ID : 44100923831

Option 4 ID : 44100923832

Q.19 The population of a city increases by 5% annually. The present population of the city is 1,86,102. The population of this city two years ago was _____.

- Ans
- 1. 1,88,600
 - 2. 1,68,800
 - 3. 1,86,800
 - 4. 84,400

Question ID : 441009183353
Option 1 ID : 441009724821
Option 2 ID : 441009724818
Option 3 ID : 441009724819
Option 4 ID : 441009724820

Q.20 Ajay takes 46 hours to row 130 km upstream and 260 km downstream. Additionally, he takes 34 hours to swim 90 km upstream and 208 km downstream. What is the speed of Ajay in still water?

- Ans
- 1. 9 km/hr
 - 2. 7 km/hr
 - 3. 12 km/hr
 - 4. 10 km/hr

Question ID : 44100952227
Option 1 ID : 441009208028
Option 2 ID : 441009208027
Option 3 ID : 441009208030
Option 4 ID : 441009208029

Section : English Language and Comprehension

Q.1 Choose the option that shows the same kind of relationship/connection as the given sentence.

The thief broke the lock to enter the house.

- Ans
- 1. The player trained hard for the match.
 - 2. The author revised the manuscript again.
 - 3. The gardener watered the plants in the morning.
 - 4. The spy hacked the system to steal data.

Question ID : 4410091526308
Option 1 ID : 4410096028350
Option 2 ID : 4410096028352
Option 3 ID : 4410096028351
Option 4 ID : 4410096028353

Q.2 Select the most appropriate article to fill in the blank. If no article is needed, select 'No article required'.

She read about ____ theory of relativity in the physics textbook.

- Ans
- 1. a
 - 2. No article required
 - 3. the
 - 4. an

Question ID : 4410091087917
Option 1 ID : 4410094289199
Option 2 ID : 4410094289202
Option 3 ID : 4410094289201
Option 4 ID : 4410094289200

Q.3 Select the option that is the most appropriate antonym of the underlined word in the given sentence.

He was criticised for his insolent behaviour.

- Ans
- 1. courteous
 - 2. unethical
 - 3. aggressive
 - 4. warranted

Question ID : 4410091639651
Option 1 ID : 4410096476019
Option 2 ID : 4410096476018
Option 3 ID : 4410096476021
Option 4 ID : 4410096476020

Q.4 In the given question, a statement divided into different segments is given. The first segment is fixed. Rearrange the other segments to form a coherent statement.

1)The innovative scientist conducted a series of experiments
A) that could change the future of medicine
B) with meticulous attention to detail
C) in her state-of-the-art laboratory
D) leading to ground breaking discoveries

- Ans
- 1. 1-B-A-C-D
 - 2. 1-C-A-D-B
 - 3. 1-C-B-D-A
 - 4. 1-D-B-A-C

Question ID : 4410091524487
Option 1 ID : 4410096021184
Option 2 ID : 4410096021187
Option 3 ID : 4410096021186
Option 4 ID : 4410096021185

Q.5 Substitute with one word
The term that refers to the systematic study of religion and religious beliefs.

- Ans
- 1. Sociology
 - 2. Theology
 - 3. Anthropology
 - 4. Mythology

Question ID : 4410091526261
Option 1 ID : 4410096028164
Option 2 ID : 4410096028163
Option 3 ID : 4410096028162
Option 4 ID : 4410096028165

Q.6 Select the option that is the most appropriate antonym of the underlined word in the given sentence.

The government's response to the disaster was expeditious and effective.

- Ans
- 1. coordinated
 - 2. haphazard
 - 3. decentralised
 - 4. lagging

Question ID : 4410091639700
Option 1 ID : 4410096476130
Option 2 ID : 4410096476131
Option 3 ID : 4410096476132
Option 4 ID : 4410096476133

Q.7 Complete the sentence with the appropriate word.
The team worked _____ to finish the project before the deadline.

- Ans
- 1. reluctantly
 - 2. rarely
 - 3. randomly
 - 4. tirelessly

Question ID : 4410091553002
Option 1 ID : 4410096134325
Option 2 ID : 4410096134326
Option 3 ID : 4410096134327
Option 4 ID : 4410096134324

Q.8 Choose the option that can replace the highlighted text with the correct proverb. After losing the match, the team realized that there was no point worrying about what had already happened hence they started to focus on preparing for the next game.

- Ans
- 1. A stitch in time saves nine
 - 2. It's no use crying over spilt milk
 - 3. Actions speak louder than words
 - 4. Empty vessels make

Question ID : 4410091527687
Option 1 ID : 4410096033959
Option 2 ID : 4410096033960
Option 3 ID : 4410096033962
Option 4 ID : 4410096033961

Q.9 Parts of a sentence are given below in jumbled order. The first part of the sentence is fixed, followed by P, Q, R, S, and T. Arrange the jumbled parts in the correct order to form a meaningful sentence.

The cleanliness drive in India

P: for spreading awareness

Q: under the Swachh Bharat Abhiyan

R: has become a nationwide movement

S: among school and college students

T: led by enthusiastic volunteers

- Ans
- 1. Q R T P S
 - 2. S Q T P R
 - 3. T R P S Q
 - 4. P S Q T R

Question ID : 4410091096080
Option 1 ID : 4410094321701
Option 2 ID : 4410094321704
Option 3 ID : 4410094321702
Option 4 ID : 4410094321703

Q.10 Parts of the given sentence have been underlined. One of them contains a spelling error. The underlined parts are given as options with some changes. Select the option that correctly rectifies the error.

If someone priorritizes something over others, he treats it as more important than other things.

- Ans
- 1. Thinngs
 - 2. Somaone
 - 3. Immportant
 - 4. Prioritizes

Question ID : 4410091385304
Option 1 ID : 4410095471959
Option 2 ID : 4410095471956
Option 3 ID : 4410095471958
Option 4 ID : 4410095471957

Q.11 Select the misspelt word.

- Ans 1. Casualty
 2. Deterreed
 3. Binocular
 4. Cowardice

Question ID : 4410091265528
Option 1 ID : 4410094995014
Option 2 ID : 4410094995016
Option 3 ID : 4410094995015
Option 4 ID : 4410094995017

Q.12 A sentence has been given with highlighted text. You are required to replace it with the correct idiom from the options.

By rebuking the protestors, you will only aggravate the situation and perhaps cause more problems.

- Ans 1. kick up a row
 2. add fuel to the fire
 3. break loose
 4. break the ice

Question ID : 441009171280
Option 1 ID : 441009678012
Option 2 ID : 441009678011
Option 3 ID : 441009678009
Option 4 ID : 441009678010

Q.13 Complete the sentence with the appropriate word.

The students _____ their notebooks during the lecture.

- Ans 1. narrated
 2. opened
 3. discarded
 4. published

Question ID : 4410091553015
Option 1 ID : 4410096134378
Option 2 ID : 4410096134376
Option 3 ID : 4410096134377
Option 4 ID : 4410096134379

Q.14 Select the most appropriate option to fill in the blank.

The novel offers a ____ portrayal of rural life, neither idealising nor condemning it.

- Ans 1. balanced
 2. superficial
 3. distorted
 4. sentimental

Question ID : 4410091481676
Option 1 ID : 4410095853767
Option 2 ID : 4410095853766
Option 3 ID : 4410095853768
Option 4 ID : 4410095853769

Q.15 Choose the appropriate option to complete the sentence.

Meera narrated ____ incredible story about her travels and shared ____ amusing incident from her childhood.

- Ans 1. an / an
 2. a / a
 3. the / a
 4. the / the

Question ID : 4410091308129
Option 1 ID : 4410095164177
Option 2 ID : 4410095164175
Option 3 ID : 4410095164178
Option 4 ID : 4410095164176

Comprehension:

Read the given passage and answer the questions that follow.

The night was routine, the sky clear, as Malaysia Airlines Flight MH370 soared above the South China Sea. The Boeing 777, carrying 239 passengers and crew, had just begun its journey from Kuala Lumpur to Beijing. Inside the cabin, travellers settled in—some asleep, others watching movies, unaware that they were part of what would become one of aviation's greatest mysteries.

At 1:19 a.m., the pilot's calm voice radioed air traffic control: "Good night, Malaysian three-seven-zero." Minutes later, the plane vanished from radar. No distress signal. No final call. Just silence. As confusion turned to panic, search teams scrambled across vast oceans, chasing scattered leads. Satellite data suggested the aircraft had veered off course, flying for hours into the remote Indian Ocean.

Despite the largest and most expensive search effort in aviation history, only a few debris pieces were ever found. Theories arose—mechanical failure, pilot intervention, hijacking—but the truth remained elusive. Families waited for answers that never came.

Even today, the fate of MH370 haunts the world. It is a chilling reminder of how, in an age of technology, a massive aircraft can simply disappear—leaving behind only questions, grief and an endless sky.

SubQuestion No : 16

Q.16 What made the disappearance of MH370 unusual?

- Ans**
- 1. It vanished from radar without any warning or final communication.
 - 2. It was found shortly after crashing into the sea.
 - 3. The flight was never scheduled to take off that day.
 - 4. The aircraft sent multiple distress signals before vanishing.

Question ID : 44100928667
Option 1 ID : 441009114191
Option 2 ID : 441009114193
Option 3 ID : 441009114194
Option 4 ID : 441009114192

Comprehension:

Read the given passage and answer the questions that follow.

The night was routine, the sky clear, as Malaysia Airlines Flight MH370 soared above the South China Sea. The Boeing 777, carrying 239 passengers and crew, had just begun its journey from Kuala Lumpur to Beijing. Inside the cabin, travellers settled in—some asleep, others watching movies, unaware that they were part of what would become one of aviation's greatest mysteries.

At 1:19 a.m., the pilot's calm voice radioed air traffic control: "Good night, Malaysian three-seven-zero." Minutes later, the plane vanished from radar. No distress signal. No final call. Just silence. As confusion turned to panic, search teams scrambled across vast oceans, chasing scattered leads. Satellite data suggested the aircraft had veered off course, flying for hours into the remote Indian Ocean.

Despite the largest and most expensive search effort in aviation history, only a few debris pieces were ever found. Theories arose—mechanical failure, pilot intervention, hijacking—but the truth remained elusive. Families waited for answers that never came.

Even today, the fate of MH370 haunts the world. It is a chilling reminder of how, in an age of technology, a massive aircraft can simply disappear—leaving behind only questions, grief and an endless sky.

SubQuestion No : 17

Q.17 What is one of the biggest challenges in solving the MH370 mystery?

- Ans**
- 1. The absence of eyewitnesses in the cockpit
 - 2. The clear recordings of the final moments of the flight
 - 3. The remote location where the plane is believed to have crashed
 - 4. The overwhelming amount of evidence collected

Question ID : 44100928668
Option 1 ID : 441009114195
Option 2 ID : 441009114198
Option 3 ID : 441009114196
Option 4 ID : 441009114197

Comprehension:

Read the given passage and answer the questions that follow.

The night was routine, the sky clear, as Malaysia Airlines Flight MH370 soared above the South China Sea. The Boeing 777, carrying 239 passengers and crew, had just begun its journey from Kuala Lumpur to Beijing. Inside the cabin, travellers settled in—some asleep, others watching movies, unaware that they were part of what would become one of aviation's greatest mysteries.

At 1:19 a.m., the pilot's calm voice radioed air traffic control: "Good night, Malaysian three-seven-zero." Minutes later, the plane vanished from radar. No distress signal. No final call. Just silence. As confusion turned to panic, search teams scrambled across vast oceans, chasing scattered leads. Satellite data suggested the aircraft had veered off course, flying for hours into the remote Indian Ocean.

Despite the largest and most expensive search effort in aviation history, only a few debris pieces were ever found. Theories arose—mechanical failure, pilot intervention, hijacking—but the truth remained elusive. Families waited for answers that never came.

Even today, the fate of MH370 haunts the world. It is a chilling reminder of how, in an age of technology, a massive aircraft can simply disappear—leaving behind only questions, grief and an endless sky.

SubQuestion No : 18

Q.18 What does the search for MH370 highlight about modern aviation?

- Ans**
- 1. The challenges of tracking planes over vast oceans
 - 2. The ability of technology to prevent aircraft disappearances
 - 3. The efficiency of aviation safety protocols
 - 4. The importance of passenger cooperation during flights

Question ID : 44100928669
Option 1 ID : 441009114201
Option 2 ID : 441009114200
Option 3 ID : 441009114199
Option 4 ID : 441009114202

Comprehension:

Read the given passage and answer the questions that follow.

The night was routine, the sky clear, as Malaysia Airlines Flight MH370 soared above the South China Sea. The Boeing 777, carrying 239 passengers and crew, had just begun its journey from Kuala Lumpur to Beijing. Inside the cabin, travellers settled in—some asleep, others watching movies, unaware that they were part of what would become one of aviation's greatest mysteries.

At 1:19 a.m., the pilot's calm voice radioed air traffic control: "Good night, Malaysian three-seven-zero." Minutes later, the plane vanished from radar. No distress signal. No final call. Just silence. As confusion turned to panic, search teams scrambled across vast oceans, chasing scattered leads. Satellite data suggested the aircraft had veered off course, flying for hours into the remote Indian Ocean.

Despite the largest and most expensive search effort in aviation history, only a few debris pieces were ever found. Theories arose—mechanical failure, pilot intervention, hijacking—but the truth remained elusive. Families waited for answers that never came.

Even today, the fate of MH370 haunts the world. It is a chilling reminder of how, in an age of technology, a massive aircraft can simply disappear—leaving behind only questions, grief and an endless sky.

SubQuestion No : 19

Q.19 Select the most appropriate **ANTONYM** of the word 'elusive' in the context of the MH370 investigation.

- Ans**
- 1. Hidden
 - 2. Obvious
 - 3. Unclear
 - 4. Mysterious

Question ID : 44100928670
Option 1 ID : 441009114203
Option 2 ID : 441009114204
Option 3 ID : 441009114205
Option 4 ID : 441009114206

Comprehension:

Read the given passage and answer the questions that follow.

The night was routine, the sky clear, as Malaysia Airlines Flight MH370 soared above the South China Sea. The Boeing 777, carrying 239 passengers and crew, had just begun its journey from Kuala Lumpur to Beijing. Inside the cabin, travellers settled in—some asleep, others watching movies, unaware that they were part of what would become one of aviation's greatest mysteries.

At 1:19 a.m., the pilot's calm voice radioed air traffic control: "Good night, Malaysian three-seven-zero." Minutes later, the plane vanished from radar. No distress signal. No final call. Just silence. As confusion turned to panic, search teams scrambled across vast oceans, chasing scattered leads. Satellite data suggested the aircraft had veered off course, flying for hours into the remote Indian Ocean.

Despite the largest and most expensive search effort in aviation history, only a few debris pieces were ever found. Theories arose—mechanical failure, pilot intervention, hijacking—but the truth remained elusive. Families waited for answers that never came.

Even today, the fate of MH370 haunts the world. It is a chilling reminder of how, in an age of technology, a massive aircraft can simply disappear—leaving behind only questions, grief and an endless sky.

SubQuestion No : 20

Q.20 What is the overall tone of the passage?

- Ans**
- 1. Hopeful and optimistic
 - 2. Mysterious and tragic
 - 3. Aggressive and confrontational
 - 4. Humorous and lighthearted

Question ID : 44100928671
Option 1 ID : 441009114208
Option 2 ID : 441009114207
Option 3 ID : 441009114210
Option 4 ID : 441009114209

Section : Hindi Language and Comprehension

Q.1 निम्नलिखित वाक्यों को ध्यान से पढ़कर दिए गए विकल्पों में से उचित क्रम चुनिए -

1. दूसरी मस्तिष्क की
2. मनुष्य की समस्याएँ दो प्रकार की हैं
3. किन्तु प्रत्येक मनुष्य की अंतिम परिणति मृत्यु है
4. एक समस्या शरीर की है

- Ans**
- 1. 4, 1, 3, 2
 - 2. 2, 4, 1, 3
 - 3. 1, 3, 4, 2
 - 4. 3, 2, 4, 1

Question ID : 441009317109
Option 1 ID : 4410091234932
Option 2 ID : 4410091234930
Option 3 ID : 4410091234931
Option 4 ID : 4410091234933

Q.2 निम्नलिखित वाक्य के रेखांकित शब्द का पर्यायवाची कौन-सा नहीं है?
'मेरी माँ मुझे बहुत प्रेम करती है।'

- Ans 1. पूजनीय
 2. मैया
 3. माता
 4. जननी

Question ID : 4410091530834
 Option 1 ID : 4410096046420
 Option 2 ID : 4410096046421
 Option 3 ID : 4410096046419
 Option 4 ID : 4410096046422

Q.3 दिये गए वाक्य के रेखांकित शब्द का विलोम शब्द चुनिए -

साहित्यकार ने कहानी के माध्यम से सामाजिक व्यवस्था की आलोचना परोक्ष रूप से की।

- Ans 1. अप्रत्यक्ष
 2. प्रत्यक्ष
 3. प्रमाण
 4. साक्ष्य

Question ID : 4410091547314
 Option 1 ID : 4410096112126
 Option 2 ID : 4410096112123
 Option 3 ID : 4410096112124
 Option 4 ID : 4410096112125

Q.4 दिए गए वाक्य को सही क्रम में लगाइए-
(1)रोज (2)करना (3)व्यायाम (4)हमें (5)चाहिए

- Ans 1. 4 1 3 2 5
 2. 1 2 3 4 5
 3. 5 1 3 2 4
 4. 3 4 5 1 2

Question ID : 4410091141423
 Option 1 ID : 4410094500648
 Option 2 ID : 4410094500649
 Option 3 ID : 4410094500651
 Option 4 ID : 4410094500650

Q.5 निम्न में से 'ताल ठोकना' मुहावरे का सही अर्थ कौन-सा है ?

- Ans
- 1. नष्ट-भ्रष्ट होना
 - 2. बुरे दिन आना
 - 3. लड़ने के लिए ललकार देना
 - 4. इशारों पर चलना

Question ID : 4410091626221
Option 1 ID : 4410096423283
Option 2 ID : 4410096423282
Option 3 ID : 4410096423281
Option 4 ID : 4410096423284

Q.6 निम्नलिखित वाक्य में से वर्तनी त्रुटि की पहचान कर वाक्य को शुद्ध कीजिए।
'भरथ, अपने बड़े भाई श्रीराम के प्रति गहरी निष्ठा और सम्मान का भाव रखते थे।'

- Ans
- 1. भरथ
 - 2. निष्ठा
 - 3. सम्मान
 - 4. प्रति

Question ID : 4410091629715
Option 1 ID : 4410096436949
Option 2 ID : 4410096436946
Option 3 ID : 4410096436947
Option 4 ID : 4410096436948

Q.7 नीचे दिए गए वाक्यों में से वर्तनी की दृष्टि से शुद्ध वाक्य का चयन कीजिए।

- Ans
- 1. अत्यधिक दुःख सहा नहीं जाता ।
 - 2. संसारिक समस्या क्या है ?
 - 3. मालन ताज़ा फूल लाई है।
 - 4. यह नेता मंत्रीपरिषद् में नहीं है।

Question ID : 4410091526753
Option 1 ID : 4410096030123
Option 2 ID : 4410096030122
Option 3 ID : 4410096030125
Option 4 ID : 4410096030124

Q.8 उपयुक्त 'क्रिया-विशेषण' का चयन कर रिक्त स्थान की पूर्ति कीजिए।
'कलसे बारिश होने लगी थी।'

- Ans
- 1. अचानक
 - 2. घर-घर
 - 3. दिन-रात
 - 4. ठीक

Question ID : 4410091524873
Option 1 ID : 4410096022696
Option 2 ID : 4410096022698
Option 3 ID : 4410096022697
Option 4 ID : 4410096022695

Q.9 निम्नलिखित में से किस मुहावरे का अर्थ संगत नहीं है?

- Ans
- 1. फट पड़ना - एकदम गुस्से में हो जाना
 - 2. सिटी-पिट्टी गुम हो जाना - होश उड़ जाना
 - 3. सोने का घर मिट्टी कर देना - आने-जाने की जल्दी मचाना
 - 4. हवा के घोड़े पर सवार होना - आने-जाने की जल्दी मचाना

Question ID : 4410091626157
Option 1 ID : 4410096423029
Option 2 ID : 4410096423031
Option 3 ID : 4410096423032
Option 4 ID : 4410096423030

Q.10 सही क्रिया का चयन कर वाक्य को पूर्ण कीजिए।
सानिया पिंजड़े से तोतादेती है।

- Ans
- 1. सिला
 - 2. बैठा
 - 3. उड़ा
 - 4. खिला

Question ID : 4410091253828
Option 1 ID : 4410094948372
Option 2 ID : 4410094948370
Option 3 ID : 4410094948369
Option 4 ID : 4410094948371

Q.11 निम्नलिखित वाक्य में रेखांकित शब्द के पर्यायवाची शब्द का चयन दिए गए विकल्पों में से कीजिए-
शरद पूर्णिमा के 'चाँद' की छटा ही निराली होती है।

- Ans
- 1. दिवाकर
 - 2. इन्दु
 - 3. मोहिनी
 - 4. रत्नेश

Question ID : 4410091618506
Option 1 ID : 4410096392896
Option 2 ID : 4410096392895
Option 3 ID : 4410096392897
Option 4 ID : 4410096392898

Q.12 निम्न में से 'अंगारों पर पैर रखना' मुहावरे का सही अर्थ बताइए -

- Ans
- 1. अपने को होशियार समझना
 - 2. कुछ दिनों की शानोशौकत
 - 3. जान-बूझकर हानिकारक कार्य करना
 - 4. रहने का संयोग न होना

Question ID : 4410091526270
Option 1 ID : 4410096028200
Option 2 ID : 4410096028198
Option 3 ID : 4410096028201
Option 4 ID : 4410096028199

Q.13 निम्नांकित विकल्पों में से उचित कारक चिन्ह का चयन करके वाक्य पूर्ण करें-
सभी बच्चों मिलकर अपने विद्यालय के मैदान की सफाई की।

- Ans
- 1. से
 - 2. को
 - 3. के
 - 4. ने

Question ID : 4410091254718
Option 1 ID : 4410094951855
Option 2 ID : 4410094951857
Option 3 ID : 4410094951856
Option 4 ID : 4410094951854

Q.14 उचित विशेषण शब्द चुनकर वाक्य पूरा कीजिए।
' _____ गधा भागा जा रहा है। '

- Ans 1. वह
 2. वे
 3. जिस
 4. जितना

Question ID : 4410091288612
Option 1 ID : 4410095086320
Option 2 ID : 4410095086318
Option 3 ID : 4410095086319
Option 4 ID : 4410095086321

Q.15 उपयुक्त अधिकरण कारक के प्रयोग से वाक्य को पूर्ण कीजिए।
बच्चा पलंग सोया है।

- Ans 1. पर
 2. के लिए
 3. से
 4. में

Question ID : 4410091251181
Option 1 ID : 4410094937906
Option 2 ID : 4410094937905
Option 3 ID : 4410094937908
Option 4 ID : 4410094937907

Comprehension:

निम्नलिखित गद्यांश के आधार पर पूछे गए प्रश्नों के सही विकल्प का चयन करें-
हमारी सर्वोच्च प्राथमिकता जनसंख्या वृद्धि रोकना है। यह स्पष्ट है कि परिवार के आकार पर आर्थिक विकास और शिक्षा का बहुत प्रभाव पड़ता है। यहाँ आर्थिक विकास का मतलब पाश्चात्य मतानुसार भौतिकवाद नहीं जहाँ बच्चों को बोझ माना जाता है। हमारे लिए तो यह सम्मानपूर्वक जीने के स्तर से सम्बन्धित है। यह मौजूदा सम्पत्ति के समतामूलक विवरण पर ही निर्भर नहीं है वरन् ऐसी शैली अपनाने से सम्बन्धित है जिसमें अस्सी करोड़ लोगों की ऊर्जा का बेहतर इस्तेमाल हो सके। इसी प्रकार स्त्री-शिक्षा भी है। यह समाज में एक नए प्रकार का चिन्तन पैदा करेगी जिससे सामाजिक और आर्थिक विकास के नए आयाम खुलेंगे और साथ ही बच्चों के विकास का नया रास्ता भी खुलेगा। अतः जनसंख्या की समस्या सामाजिक है। यह अकेले सरकार नहीं सुलझा सकती। केन्द्रीयकरण से हटकर इसे ग्राम-ग्राम, व्यक्ति-व्यक्ति तक पहुँचाना होगा। जब तक यह जन आन्दोलन नहीं बन जाता तब तक सफलता मिलना संदिग्ध है।

SubQuestion No : 16

Q.16 परिवार के आकार को मुख्य रूप से कौन से दो कारक प्रभावित करते हैं?

- Ans 1. सरकारी कानून और दंड
 2. शहरीकरण और आधुनिकता
 3. आर्थिक विकास और शिक्षा
 4. धार्मिक मान्यताएँ और परंपराएँ

Question ID : 4410091617864
Option 1 ID : 4410096390342
Option 2 ID : 4410096390339
Option 3 ID : 4410096390340
Option 4 ID : 4410096390341

Comprehension:

निम्नलिखित गद्यांश के आधार पर पूछे गए प्रश्नों के सही विकल्प का चयन करें-

हमारी सर्वोच्च प्राथमिकता जनसंख्या वृद्धि रोकना है। यह स्पष्ट है कि परिवार के आकार पर आर्थिक विकास और शिक्षा का बहुत प्रभाव पड़ता है। यहाँ आर्थिक विकास का मतलब पाश्चात्य मतानुसार भौतिकवाद नहीं जहाँ बच्चों को बोझ माना जाता है। हमारे लिए तो यह सम्मानपूर्वक जीने के स्तर से सम्बन्धित है। यह मौजूदा सम्पत्ति के समतामूलक विवरण पर ही निर्भर नहीं है वरन् ऐसी शैली अपनाने से सम्बन्धित है जिसमें अस्सी करोड़ लोगों की ऊर्जा का बेहतर इस्तेमाल हो सके। इसी प्रकार स्त्री-शिक्षा भी है। यह समाज में एक नए प्रकार का चिन्तन पैदा करेगी जिससे सामाजिक और आर्थिक विकास के नए आयाम खुलेंगे और साथ ही बच्चों के विकास का नया रास्ता भी खुलेगा। अतः जनसंख्या की समस्या सामाजिक है। यह अकेले सरकार नहीं सुलझा सकती। केन्द्रीयकरण से हटकर इसे ग्राम-ग्राम, व्यक्ति-व्यक्ति तक पहुँचाना होगा। जब तक यह जन आन्दोलन नहीं बन जाता तब तक सफलता मिलना संदिग्ध है।

SubQuestion No : 17

Q.17 लेखक के अनुसार 'आर्थिक विकास' का भारतीय संदर्भ में क्या अर्थ है?

- Ans
- 1. विदेशी निवेश में वृद्धि करना
 - 2. केवल संपत्ति का समान वितरण करना
 - 3. पाश्चात्य भौतिकवाद को अपनाना
 - 4. सम्मानपूर्वक जीने के स्तर को प्राप्त करना

Question ID : 4410091617865

Option 1 ID : 4410096390345

Option 2 ID : 4410096390346

Option 3 ID : 4410096390343

Option 4 ID : 4410096390344

Comprehension:

निम्नलिखित गद्यांश के आधार पर पूछे गए प्रश्नों के सही विकल्प का चयन करें-

हमारी सर्वोच्च प्राथमिकता जनसंख्या वृद्धि रोकना है। यह स्पष्ट है कि परिवार के आकार पर आर्थिक विकास और शिक्षा का बहुत प्रभाव पड़ता है। यहाँ आर्थिक विकास का मतलब पाश्चात्य मतानुसार भौतिकवाद नहीं जहाँ बच्चों को बोझ माना जाता है। हमारे लिए तो यह सम्मानपूर्वक जीने के स्तर से सम्बन्धित है। यह मौजूदा सम्पत्ति के समतामूलक विवरण पर ही निर्भर नहीं है वरन् ऐसी शैली अपनाने से सम्बन्धित है जिसमें अस्सी करोड़ लोगों की ऊर्जा का बेहतर इस्तेमाल हो सके। इसी प्रकार स्त्री-शिक्षा भी है। यह समाज में एक नए प्रकार का चिन्तन पैदा करेगी जिससे सामाजिक और आर्थिक विकास के नए आयाम खुलेंगे और साथ ही बच्चों के विकास का नया रास्ता भी खुलेगा। अतः जनसंख्या की समस्या सामाजिक है। यह अकेले सरकार नहीं सुलझा सकती। केन्द्रीयकरण से हटकर इसे ग्राम-ग्राम, व्यक्ति-व्यक्ति तक पहुँचाना होगा। जब तक यह जन आन्दोलन नहीं बन जाता तब तक सफलता मिलना संदिग्ध है।

SubQuestion No : 18

Q.18 स्त्री-शिक्षा को जनसंख्या नियंत्रण में क्यों महत्वपूर्ण माना गया है?

- Ans
- 1. यह समाज में नया चिंतन पैदा करती है
 - 2. यह सरकारी बोझ कम करती है
 - 3. इससे जनसंख्या का केंद्रीकरण रुकता है
 - 4. इससे स्त्रियों केवल नौकरी कर सकेंगी

Question ID : 4410091617866

Option 1 ID : 4410096390350

Option 2 ID : 4410096390348

Option 3 ID : 4410096390349

Option 4 ID : 4410096390347

Comprehension:

निम्नलिखित गद्यांश के आधार पर पूछे गए प्रश्नों के सही विकल्प का चयन करें-

हमारी सर्वोच्च प्राथमिकता जनसंख्या वृद्धि रोकना है। यह स्पष्ट है कि परिवार के आकार पर आर्थिक विकास और शिक्षा का बहुत प्रभाव पड़ता है। यहाँ आर्थिक विकास का मतलब पाश्चात्य मतानुसार भौतिकवाद नहीं जहाँ बच्चों को बोझ माना जाता है। हमारे लिए तो यह सम्मानपूर्वक जीने के स्तर से सम्बन्धित है। यह मौजूदा सम्पत्ति के समतामूलक विवरण पर ही निर्भर नहीं है वरन् ऐसी शैली अपनाने से सम्बन्धित है जिसमें अस्सी करोड़ लोगों की ऊर्जा का बेहतर इस्तेमाल हो सके। इसी प्रकार स्त्री-शिक्षा भी है। यह समाज में एक नए प्रकार का चिन्तन पैदा करेगी जिससे सामाजिक और आर्थिक विकास के नए आयाम खुलेंगे और साथ ही बच्चों के विकास का नया रास्ता भी खुलेगा। अतः जनसंख्या की समस्या सामाजिक है। यह अकेले सरकार नहीं सुलझा सकती। केन्द्रीयकरण से हटकर इसे ग्राम-ग्राम, व्यक्ति-व्यक्ति तक पहुँचाना होगा। जब तक यह जन आन्दोलन नहीं बन जाता तब तक सफलता मिलना संदिग्ध है।

SubQuestion No : 19

Q.19 जनसंख्या नियंत्रण में सफलता मिलने की संभावना कब तक संदिग्ध है?

- Ans
- 1. जब तक सरकार कड़े नियम न बनाए
 - 2. जब तक अस्सी करोड़ लोग शिक्षित न हो जाएँ
 - 3. जब तक नई तकनीक न आ जाए
 - 4. जब तक यह एक जन आंदोलन नहीं बन जाता

Question ID : 4410091617867

Option 1 ID : 4410096390354

Option 2 ID : 4410096390353

Option 3 ID : 4410096390351

Option 4 ID : 4410096390352

Comprehension:

निम्नलिखित गद्यांश के आधार पर पूछे गए प्रश्नों के सही विकल्प का चयन करें-

हमारी सर्वोच्च प्राथमिकता जनसंख्या वृद्धि रोकना है। यह स्पष्ट है कि परिवार के आकार पर आर्थिक विकास और शिक्षा का बहुत प्रभाव पड़ता है। यहाँ आर्थिक विकास का मतलब पाश्चात्य मतानुसार भौतिकवाद नहीं जहाँ बच्चों को बोझ माना जाता है। हमारे लिए तो यह सम्मानपूर्वक जीने के स्तर से सम्बन्धित है। यह मौजूदा सम्पत्ति के समतामूलक विवरण पर ही निर्भर नहीं है वरन् ऐसी शैली अपनाने से सम्बन्धित है जिसमें अस्सी करोड़ लोगों की ऊर्जा का बेहतर इस्तेमाल हो सके। इसी प्रकार स्त्री-शिक्षा भी है। यह समाज में एक नए प्रकार का चिन्तन पैदा करेगी जिससे सामाजिक और आर्थिक विकास के नए आयाम खुलेंगे और साथ ही बच्चों के विकास का नया रास्ता भी खुलेगा। अतः जनसंख्या की समस्या सामाजिक है। यह अकेले सरकार नहीं सुलझा सकती। केन्द्रीयकरण से हटकर इसे ग्राम-ग्राम, व्यक्ति-व्यक्ति तक पहुँचाना होगा। जब तक यह जन आन्दोलन नहीं बन जाता तब तक सफलता मिलना संदिग्ध है।

SubQuestion No : 20

Q.20 लेखक ने 'केन्द्रीकरण' के विरुद्ध क्या सुझाव दिया है?

- Ans
- 1. सिर्फ शहरों में अस्पताल खोलना
 - 2. विदेशी मॉडल को पूर्णतः लागू करना
 - 3. सभी शक्तियाँ केंद्र सरकार को देना
 - 4. योजना को ग्राम और व्यक्ति स्तर तक पहुँचाना

Question ID : 4410091617868

Option 1 ID : 4410096390356

Option 2 ID : 4410096390358

Option 3 ID : 4410096390355

Option 4 ID : 4410096390357

Q.1 Which principle of growth and development explains why children gain control of their head and upper body movements before they can control their legs and feet?

- Ans
- 1. Proximodistal principle
 - 2. Maturation
 - 3. Principle of individual differences
 - 4. Cephalocaudal principle

Question ID : 4410091607639
Option 1 ID : 4410096349521
Option 2 ID : 4410096349522
Option 3 ID : 4410096349523
Option 4 ID : 4410096349520

Q.2 How did the implementation of the Universalization of Elementary Education (UEE) impact the demand for secondary education in India?

- Ans
- 1. It had no impact on secondary education
 - 2. It decreased household interest in education
 - 3. It reduced the need for secondary schools
 - 4. It increased the demand for secondary education

Question ID : 4410091679541
Option 1 ID : 4410096626350
Option 2 ID : 4410096626351
Option 3 ID : 4410096626349
Option 4 ID : 4410096626352

Q.3 During which stage do children develop the ability to understand that objects continue to exist even when out of sight?

- Ans
- 1. Formal operational stage
 - 2. Pre-operational stage
 - 3. Concrete operational stage
 - 4. Sensorimotor stage

Question ID : 4410091630960
Option 1 ID : 4410096442069
Option 2 ID : 4410096442066
Option 3 ID : 4410096442068
Option 4 ID : 4410096442067

Q.4 A teacher in Varanasi wants to promote motor development in infants. Which activity would best support the development of both gross and fine motor skills in children under one year?

- Ans
- 1. Encouraging group games that involve running and jumping
 - 2. Providing tummy time and offering colorful blocks to grasp
 - 3. Teaching children to button shirts and tie shoelaces
 - 4. Reading picture books aloud and singing lullabies daily

Question ID : 4410091604042
Option 1 ID : 4410096335360
Option 2 ID : 4410096335358
Option 3 ID : 4410096335361
Option 4 ID : 4410096335359

Q.5 According to Piaget's theory, which cognitive ability marks the preoperational stage in children?

- Ans
- 1. Ability to solve complex logical problems
 - 2. Ability to use symbols and language
 - 3. Ability to understand conservation of mass
 - 4. Ability to think in abstract terms

Question ID : 4410091630109
Option 1 ID : 4410096438544
Option 2 ID : 4410096438542
Option 3 ID : 4410096438543
Option 4 ID : 4410096438545

Q.6 What does 'socialization' primarily refer to in the context of education?

- Ans
- 1. The process of learning a new language for communication in diverse settings.
 - 2. The process of teaching only academic subjects like math and science in classrooms.
 - 3. The act of forming friendships only in school environments with peer groups.
 - 4. The process by which individuals learn and adopt the norms, values, and behaviors of their society.

Question ID : 4410091605830
Option 1 ID : 4410096342371
Option 2 ID : 4410096342369
Option 3 ID : 4410096342370
Option 4 ID : 4410096342368

Q.7 Which of the following best defines a curriculum in the context of education?

- Ans
- 1. A schedule of school holidays and events
 - 2. A list of textbooks used in a school
 - 3. A collection of exam papers
 - 4. A planned set of learning experiences

Question ID : 4410091649679
Option 1 ID : 4410096514848
Option 2 ID : 4410096514847
Option 3 ID : 4410096514849
Option 4 ID : 4410096514846

Q.8 As stated in its report, a major focus of the Mudaliar Commission was ____.

- Ans
- 1. Extending preschool
 - 2. Expanding universities
 - 3. Reforming textbooks
 - 4. Improving secondary education

Question ID : 4410091539543
Option 1 ID : 4410096081509
Option 2 ID : 4410096081511
Option 3 ID : 4410096081510
Option 4 ID : 4410096081512

Q.9 Which factors contribute to the development of personality according to Cole and Bruce?

- Ans
- 1. Genetic endowment and cultural environment
 - 2. Physical health and intelligence
 - 3. Social interactions and environment
 - 4. Economic status and education

Question ID : 4410091648482
Option 1 ID : 4410096510152
Option 2 ID : 4410096510153
Option 3 ID : 4410096510155
Option 4 ID : 4410096510154

Q.10 Which principle of growth and development is demonstrated when a child learns to control movements from the head downward?

- Ans
- 1. Cephalocaudal principle
 - 2. Equipfinality principle
 - 3. Proximal-distal principle
 - 4. Reciprocal principle

Question ID : 4410091630111
Option 1 ID : 4410096438550
Option 2 ID : 4410096438552
Option 3 ID : 4410096438553
Option 4 ID : 4410096438551

Q.11 Which provision of the RTE Act, 2009 most directly represents the core intent of Universalisation of Elementary Education (UEE)?

- Ans
- 1. Requiring periodic evaluation and qualification norms for teachers to improve instructional quality
 - 2. Extending nutritional support through school-based welfare schemes to enhance retention
 - 3. Encouraging infrastructure development and partnerships to expand educational capacity
 - 4. Mandating the State to provide free and compulsory education to all children aged 6-14 years

Question ID : 4410091628615
Option 1 ID : 4410096432608
Option 2 ID : 4410096432607
Option 3 ID : 4410096432609
Option 4 ID : 4410096432606

Q.12 During the evaluation of an educational reform proposal, critics argue it fails to uphold the 'democratic' values stated in the Preamble. Which reform measure would most clearly contradict the democratic ethos of the Constitution?

- Ans
- 1. Introducing transparent financial audits for school funds
 - 2. Allowing periodic feedback from parents and teachers
 - 3. Centralizing all decision making without stakeholder involvement
 - 4. Setting up student councils for school activities

Question ID : 4410091621481
Option 1 ID : 4410096404728
Option 2 ID : 4410096404729
Option 3 ID : 4410096404727
Option 4 ID : 4410096404730

Q.13 A state government is reviewing pupil-teacher ratios in its upper primary schools to comply with RTE standards. Which ratio should the state aim for, according to the Act?

- Ans
- 1. A pupil-teacher ratio of 35:1 in upper primary schools
 - 2. A pupil-teacher ratio of 25:1 in upper primary schools
 - 3. A pupil-teacher ratio of 20:1 in upper primary schools
 - 4. A pupil-teacher ratio of 50:1 in upper primary schools

Question ID : 4410091682713
Option 1 ID : 4410096638106
Option 2 ID : 4410096638108
Option 3 ID : 4410096638109
Option 4 ID : 4410096638107

Q.14 What learning context distinguishes primary socialization?

- Ans
- 1. Formal institutional rules
 - 2. Specialized curriculum input
 - 3. Affective familial orientation
 - 4. Objective competitive thinking

Question ID : 4410091557181
Option 1 ID : 4410096151282
Option 2 ID : 4410096151284
Option 3 ID : 4410096151283
Option 4 ID : 4410096151281

Q.15 Which developmental process best explains why fine motor skills typically mature later than gross motor skills in early childhood?

- Ans
- 1. Social learning
 - 2. Cephalocaudal development
 - 3. Proximodistal development
 - 4. Cognitive maturation

Question ID : 4410091538052
Option 1 ID : 4410096075476
Option 2 ID : 4410096075474
Option 3 ID : 4410096075473
Option 4 ID : 4410096075475

Q.16 A teacher forms mixed groups to help students from different languages and religions work together. What societal feature is she addressing?

- Ans
- 1. Structural functional interdependence
 - 2. Normative social control mechanisms
 - 3. Cultural and social diversity within society
 - 4. Social stratification through institutional roles

Question ID : 4410091567590
Option 1 ID : 4410096191663
Option 2 ID : 4410096191662
Option 3 ID : 4410096191661
Option 4 ID : 4410096191660

Q.17 Which stage of childhood is typically marked by increased peer interaction and the development of basic social skills?

- Ans
- 1. Middle childhood
 - 2. Early childhood
 - 3. Adolescence
 - 4. Infancy

Question ID : 4410091607399
Option 1 ID : 4410096348570
Option 2 ID : 4410096348569
Option 3 ID : 4410096348571
Option 4 ID : 4410096348568

Q.18 What is the most important aspect of socialization during infancy?

- Ans
- 1. Learning social rules and norms
 - 2. Development of language skills
 - 3. Secure attachment with the caregiver
 - 4. Formation of peer relationships

Question ID : 4410091679630
Option 1 ID : 4410096626699
Option 2 ID : 4410096626700
Option 3 ID : 4410096626698
Option 4 ID : 4410096626697

Q.19 A situation where more people are working than required is termed as _____.

- Ans
- 1. Seasonal unemployment
 - 2. Structural unemployment
 - 3. Disguised unemployment
 - 4. Cyclic unemployment

Question ID : 4410091544061
Option 1 ID : 4410096099345
Option 2 ID : 4410096099346
Option 3 ID : 4410096099343
Option 4 ID : 4410096099344

Q.20 A child learns what behaviour is approved or disapproved through:

- Ans
- 1. Heredity
 - 2. Socialisation
 - 3. Punishment only
 - 4. Physical growth

Question ID : 4410091570638
Option 1 ID : 4410096203529
Option 2 ID : 4410096203528
Option 3 ID : 4410096203527
Option 4 ID : 4410096203530

Section : Discipline2

Q.1 After participating in a simulated social studies debate, students are encouraged to connect their experience to academic concepts and apply these to a new community project. Which steps from Kolb's Experiential Learning Cycle does this most clearly illustrate?

- Ans
- 1. Abstract conceptualization and active experimentation
 - 2. Concrete experience and final assessment
 - 3. Reflective observation and direct instruction
 - 4. Memorization and passive note-taking

Question ID : 4410091606305
Option 1 ID : 4410096344244
Option 2 ID : 4410096344247
Option 3 ID : 4410096344245
Option 4 ID : 4410096344246

Q.2 How does language function differently inside and outside the classroom in relation to the curriculum?

- Ans
- 1. Language serves the same purpose regardless of the setting.
 - 2. Language outside the classroom is only used for entertainment.
 - 3. Inside the classroom, language is informal; outside, it is always formal.
 - 4. Language supports classroom learning and social communication.

Question ID : 4410091631458
Option 1 ID : 4410096444050
Option 2 ID : 4410096444051
Option 3 ID : 4410096444049
Option 4 ID : 4410096444048

Q.3 When designing a peer tutoring program for a classroom, which method most effectively promotes mutual academic benefit for both tutors and tutees?

- Ans
- 1. Focusing solely on group work
 - 2. Assigning only high achievers as tutors
 - 3. Rotating tutor and tutee roles regularly
 - 4. Using only fixed student pairs

Question ID : 4410091678979
Option 1 ID : 4410096624128
Option 2 ID : 4410096624126
Option 3 ID : 4410096624125
Option 4 ID : 4410096624127

Q.4 Which function does language serve outside the classroom environment?

- Ans
- 1. Enabling communication, social interaction, and the sharing of ideas in everyday life.
 - 2. Functioning solely as a tool for talking to oneself without involving others.
 - 3. Serving primarily as a method for writing your feelings
 - 4. Preserving cultural heritage without supporting interaction or understanding among people

Question ID : 4410091651106
Option 1 ID : 4410096520534
Option 2 ID : 4410096520535
Option 3 ID : 4410096520536
Option 4 ID : 4410096520537

Q.5 Which approach is a common method of a school's attempt to positively impact students' character by list of positive characteristics?

- Ans
- 1. Value statement approach
 - 2. Service learning
 - 3. Social and emotional learning
 - 4. Cognitive approach

Question ID : 4410091546665
Option 1 ID : 4410096109539
Option 2 ID : 4410096109541
Option 3 ID : 4410096109540
Option 4 ID : 4410096109542

Q.6 A teacher in a multilingual classroom encourages students to share personal experiences in their home languages while discussing a science topic. Which characteristic of pedagogy is BEST demonstrated in this scenario?

- Ans
- 1. Pedagogy is Goal-Oriented
 - 2. Pedagogy is Reflective
 - 3. Pedagogy is Contextual
 - 4. Pedagogy is Value-Based

Question ID : 4410091683361
Option 1 ID : 4410096640373
Option 2 ID : 4410096640371
Option 3 ID : 4410096640372
Option 4 ID : 4410096640370

Q.7 In peer tutoring, the tutor and tutee are usually _____.

- Ans
- 1. Learners grouped randomly without planning
 - 2. Students and school administrators
 - 3. Students with varied levels of competence
 - 4. Teachers and students of the same class

Question ID : 4410091578825
Option 1 ID : 4410096236402
Option 2 ID : 4410096236401
Option 3 ID : 4410096236400
Option 4 ID : 4410096236399

Q.8 What is a characteristic of mindfulness that distinguishes it from relaxation exercises?

- Ans
- 1. Mindfulness involves active engagement with present experiences
 - 2. Mindfulness is inherently religious and ritualistic
 - 3. Mindfulness aims at achieving a state of no thoughts
 - 4. Mindfulness focuses exclusively on physical relaxation

Question ID : 4410091652941
Option 1 ID : 4410096527118
Option 2 ID : 4410096527120
Option 3 ID : 4410096527119
Option 4 ID : 4410096527121

Q.9 Which of the following statements best captures the role of literature in developing language skills among young learners?

- Ans
- 1. Literature provides exposure to rich vocabulary, diverse structures, and cultural settings that support comprehension and critical thinking skills.
 - 2. Literature is primarily a source of entertainment and contributes only minimally to meaningful language growth and development.
 - 3. Literature is limited to grammar drills and memorization, offering little opportunity for contextual or creative language practice.
 - 4. Literature can function as a complete substitute for guided instruction in reading, writing, and other essential language skills.

Question ID : 4410091542509
Option 1 ID : 4410096093119
Option 2 ID : 4410096093120
Option 3 ID : 4410096093121
Option 4 ID : 4410096093122

Q.10 Which of the following is considered the primary and basic social group in society?

- Ans
- 1. Office
 - 2. Family
 - 3. School
 - 4. Club

Question ID : 4410091681703
Option 1 ID : 4410096634189
Option 2 ID : 4410096634186
Option 3 ID : 4410096634187
Option 4 ID : 4410096634188

Q.11 A university designs a mandatory life skills course emphasizing selfless action (nishkama karma). Which traditional Indian self-direction goal is the course primarily applying?

- Ans
- 1. Achieving individual financial security
 - 2. Realizing collective community strength
 - 3. Eliminating subjective inner conflicts
 - 4. Developing complex identity structures

Question ID : 4410091549903
Option 1 ID : 4410096122295
Option 2 ID : 4410096122296
Option 3 ID : 4410096122297
Option 4 ID : 4410096122298

Q.12 A 5-year-old can form 5-word sentences, tell simple stories, and understand over 1,000 words. According to the key milestones, which supporting factor most likely contributed to this achievement?

- Ans
- 1. Responsive talk, play, and access to books
 - 2. Formal grammar drills and rote learning
 - 3. Exclusive use of digital devices for reading
 - 4. Peer group discussions on advanced literature

Question ID : 4410091606398
Option 1 ID : 4410096344608
Option 2 ID : 4410096344609
Option 3 ID : 4410096344610
Option 4 ID : 4410096344611

Q.13 According to MacSwan's minimalist approach, what constrains code-switching?

- Ans
- 1. Exclusive use of formal language
 - 2. Universal prohibition of mixing languages
 - 3. The requirements of the mixed grammars
 - 4. Personal preference for one language

Question ID : 4410091644970
Option 1 ID : 4410096496417
Option 2 ID : 4410096496416
Option 3 ID : 4410096496414
Option 4 ID : 4410096496415

Q.14 While reviewing academic records, an administrator notices that all students are learning the same set of topics in mathematics across different schools. Which feature of the syllabus does this scenario highlight?

- Ans
- 1. Promoting holistic development through activities
 - 2. Maintaining uniform content standards for all students
 - 3. Focusing on values and attitudes
 - 4. Encouraging flexible learning experiences

Question ID : 4410091683107
Option 1 ID : 4410096639555
Option 2 ID : 4410096639556
Option 3 ID : 4410096639557
Option 4 ID : 4410096639554

Q.15 Which term best describes the shared beliefs and values of a group that influence teaching approaches?

- Ans
- 1. Classroom management
 - 2. Curriculum design
 - 3. Cultural world view
 - 4. Contemporary icon

Question ID : 4410091696643
Option 1 ID : 4410096692404
Option 2 ID : 4410096692402
Option 3 ID : 4410096692401
Option 4 ID : 4410096692403

Q.16 A local government is evaluating the long-term impact of education on its community. Using sociological insights, which evaluation method would best capture the broader effects of education on society?

- Ans
- 1. Reviewing improvements in school facilities and learning resources
 - 2. Analyzing longitudinal trends in standardized academic performance
 - 3. Examining changes in social mobility and life opportunities across generations
 - 4. Monitoring patterns of teacher attendance and workforce stability

Question ID : 4410091630355
Option 1 ID : 4410096439572
Option 2 ID : 4410096439570
Option 3 ID : 4410096439573
Option 4 ID : 4410096439571

Q.17 A teacher notices a shy student repeatedly avoiding eye contact during formal class questions. Applying observation principles, what immediate action should the teacher prioritize?

- Ans
- 1. Prompting immediate vocal responses
 - 2. Introducing immediate group work
 - 3. Analyzing non-verbal communication cues
 - 4. Interpreting cues as inherent traits

Question ID : 4410091549828
Option 1 ID : 4410096122003
Option 2 ID : 4410096122005
Option 3 ID : 4410096122004
Option 4 ID : 4410096122006

Q.18 In a multilingual classroom, how can literature be used to support language development?

- Ans
- 1. Choosing literature from a single cultural tradition exclusively.
 - 2. Using only texts written in the national language for all students.
 - 3. Selecting texts that reflect students' diverse linguistic backgrounds.
 - 4. Avoiding stories that include code-switching or translanguaging.

Question ID : 4410091641512
Option 1 ID : 4410096483161
Option 2 ID : 4410096483160
Option 3 ID : 4410096483159
Option 4 ID : 4410096483162

Q.19 What purpose does journal writing fulfil in the process of self-understanding?

- Ans
- 1. To prepare for competitive exams
 - 2. To write creative stories for entertainment
 - 3. To reflect on personal experiences and thoughts
 - 4. To memorize facts and figures

Question ID : 4410091636992
Option 1 ID : 4410096465804
Option 2 ID : 4410096465803
Option 3 ID : 4410096465802
Option 4 ID : 4410096465801

Q.20 According to Piaget's theory, which stage is most relevant for understanding how children begin to grasp fundamental mathematical concepts such as number conservation and ordering?

- Ans
- 1. Formal operational stage
 - 2. Concrete operational stage
 - 3. Preoperational stage
 - 4. Sensorimotor stage

Question ID : 4410091679049
Option 1 ID : 4410096624404
Option 2 ID : 4410096624403
Option 3 ID : 4410096624402
Option 4 ID : 4410096624401

Section : Discipline3

Q.1 Which of the following best explains why individuals differ in their learning?

- Ans
- 1. Learning depends solely on the learner's intelligence.
 - 2. Learning is influenced by both personal and environmental factors.
 - 3. Learning is entirely determined by the curriculum.
 - 4. Learning differences are caused only by the teaching methods.

Question ID : 4410091576783
Option 1 ID : 4410096227983
Option 2 ID : 4410096227986
Option 3 ID : 4410096227984
Option 4 ID : 4410096227985

Q.2 After a student incorrectly adds $5 + 3$ as 9, the teacher discusses the student's reasoning and encourages exploration of the error. According to Piaget, what learning mechanism does this practice support?

- Ans
- 1. Equilibration through self-regulation and reflection
 - 2. Direct instruction for immediate correction
 - 3. Mastery of hypothetical-deductive reasoning
 - 4. Adoption of rote memorization strategies

Question ID : 4410091613386
Option 1 ID : 4410096372378
Option 2 ID : 4410096372380
Option 3 ID : 4410096372379
Option 4 ID : 4410096372381

Q.3 Which type of play is characterized by active interaction and organized activities among children aged five to six?

- Ans
- 1. Parallel play
 - 2. Onlooker play
 - 3. Cooperative play
 - 4. Associative play

Question ID : 4410091655713
Option 1 ID : 4410096537816
Option 2 ID : 4410096537817
Option 3 ID : 4410096537819
Option 4 ID : 4410096537818

Q.4 Which sentence correctly follows the rules of subject-verb agreement?

- Ans
- 1. He go to college every morning.
 - 2. Students walks to college every morning.
 - 3. She walks to college every morning.
 - 4. They walks to college every morning.

Question ID : 4410091638801
Option 1 ID : 4410096472782
Option 2 ID : 4410096472783
Option 3 ID : 4410096472781
Option 4 ID : 4410096472780

Q.5 Which option is an example of using correct grammar but inappropriate language in a classroom setting?

- Ans
- 1. Would you mind repeating that?
 - 2. Could you please explain that again?
 - 3. Dude, could you explain that again?
 - 4. May I ask for clarification?

Question ID : 4410091621191
Option 1 ID : 4410096403571
Option 2 ID : 4410096403570
Option 3 ID : 4410096403572
Option 4 ID : 4410096403569

Q.6 In a co-educational school, a male teacher feels uncomfortable discussing attendance issues privately with female students, leading to less support for them. Which aspect of teacher identity is influencing this classroom dynamic?

- Ans
- 1. Personal gender identity shaping interactions
 - 2. Curriculum content provided by textbooks
 - 3. Peer influence among students
 - 4. Strict adherence to classroom rules

Question ID : 4410091607608
Option 1 ID : 4410096349392
Option 2 ID : 4410096349394
Option 3 ID : 4410096349395
Option 4 ID : 4410096349393

Q.7 Read the Assertion (A) and Reason (R) given below and choose the correct option.

Assertion (A): Understanding place value is essential for developing arithmetic skills in young learners.

Reason (R): Place value helps students distinguish between tens and units when solving addition problems.

- Ans
- 1. Both A and R are incorrect.
 - 2. A is correct, but R is incorrect.
 - 3. Both A and R are correct, and R is the correct explanation of A.
 - 4. Both A and R are correct, but R is not the correct explanation of A.

Question ID : 4410091609309
Option 1 ID : 4410096356163
Option 2 ID : 4410096356162
Option 3 ID : 4410096356160
Option 4 ID : 4410096356161

Q.8 What does 'school effectiveness' primarily refer to?

- Ans
- 1. Student enrollment
 - 2. Goal achievement
 - 3. Physical infrastructure
 - 4. Teacher salary

Question ID : 4410091631445
Option 1 ID : 4410096443998
Option 2 ID : 4410096443996
Option 3 ID : 4410096443997
Option 4 ID : 4410096443999

Q.9 When learners display curiosity toward a topic, they engage more actively and achieve a deeper understanding. This illustrates the importance of:

- Ans
- 1. Enforcing classroom rules
 - 2. Fostering learner interest
 - 3. Using punitive measures
 - 4. Maintaining behavioural discipline

Question ID : 4410091546993
Option 1 ID : 4410096110845
Option 2 ID : 4410096110843
Option 3 ID : 4410096110844
Option 4 ID : 4410096110842

Q.10 Which of the following alternatives in education emphasizes on learning from within and complete freedom of choice of mode of learning in early years?

- Ans
- 1. Unschooling
 - 2. Waldorf method
 - 3. Democratic schooling
 - 4. Montessori method

Question ID : 4410091546976
Option 1 ID : 4410096110777
Option 2 ID : 4410096110775
Option 3 ID : 4410096110774
Option 4 ID : 4410096110776

Q.11 Which of the following is an essential psychological attitude for a good facilitator in education?

- Ans
- 1. Being indifferent
 - 2. Being impatient
 - 3. Being strict
 - 4. Being open-minded

Question ID : 4410091619501
Option 1 ID : 4410096396862
Option 2 ID : 4410096396863
Option 3 ID : 4410096396860
Option 4 ID : 4410096396861

Q.12 In educational discourse, the conventional concept of 'schooling' is fundamentally defined as a:

- Ans
- 1. Structured learning process
 - 2. Social environment
 - 3. Community resource center
 - 4. Unregulated open forum

Question ID : 4410091550780
Option 1 ID : 4410096125404
Option 2 ID : 4410096125403
Option 3 ID : 4410096125406
Option 4 ID : 4410096125405

Q.13 What is an important role of principals as pedagogic leaders?

- Ans
- 1. Empowering teachers with professional responsibility and supportive judgments
 - 2. Designing or determining the national curriculum independently
 - 3. Focusing solely on administrative duties
 - 4. Directly managing and controlling all classroom instruction

Question ID : 4410091608321
Option 1 ID : 4410096352200
Option 2 ID : 4410096352203
Option 3 ID : 4410096352202
Option 4 ID : 4410096352201

Q.14 A student fails an exam and claims the test was unfair, refusing to accept their own lack of preparation. Which defence mechanism does this illustrate?

- Ans
- 1. Denial
 - 2. Sublimation
 - 3. Rationalization
 - 4. Projection

Question ID : 4410091696847
Option 1 ID : 4410096693192
Option 2 ID : 4410096693195
Option 3 ID : 4410096693193
Option 4 ID : 4410096693194

Q.15 In a reflective session, Mr. Singh notices that some students are hesitant to express their opinions during debates. He decides to adopt storytelling and exploratory questioning in his teaching. What facilitation skills is Mr. Singh primarily utilising to foster engagement?

- Ans
- 1. Strict classroom management and discipline
 - 2. Assigning repetitive worksheet tasks
 - 3. Active listening and exploratory questioning
 - 4. Emphasizing rote memorization techniques

Question ID : 4410091616529

Option 1 ID : 4410096385031

Option 2 ID : 4410096385033

Option 3 ID : 4410096385030

Option 4 ID : 4410096385032

Q.16 After a challenging term with mixed student results, Mr. Singh takes time to analyze his teaching methods and seeks feedback from students to improve his practice. Which aspect of teacher identity is he most demonstrating?

- Ans
- 1. Learner-centred and inclusive
 - 2. Reflective practitioner
 - 3. Agent of change
 - 4. Democratic and collaborative

Question ID : 4410091607562

Option 1 ID : 4410096349219

Option 2 ID : 4410096349217

Option 3 ID : 4410096349218

Option 4 ID : 4410096349216

Q.17 Which sentence is grammatically correct and contextually appropriate for a business email?

- Ans
- 1. I wants to discuss the project details with you tomorrow.
 - 2. I would like to discuss the project details with you tomorrow.
 - 3. I want discuss project details with you tomorrow.
 - 4. I like discussing the project details with you tomorrow.

Question ID : 4410091641751

Option 1 ID : 4410096484083

Option 2 ID : 4410096484081

Option 3 ID : 4410096484082

Option 4 ID : 4410096484084

Q.18 What is a primary responsibility of a teacher in a school setting?

- Ans
- 1. Facilitating learning
 - 2. Publishing textbooks
 - 3. Managing school finances
 - 4. Designing building layouts

Question ID : 4410091630235
Option 1 ID : 4410096439090
Option 2 ID : 4410096439093
Option 3 ID : 4410096439091
Option 4 ID : 4410096439092

Q.19 Which stage involves the ability to reason using pure symbols without perceptive data?

- Ans
- 1. Sensorimotor
 - 2. Preoperational
 - 3. Formal Operational
 - 4. Concrete Operational

Question ID : 4410091655169
Option 1 ID : 4410096535641
Option 2 ID : 4410096535642
Option 3 ID : 4410096535644
Option 4 ID : 4410096535643

Q.20 Which factor best supports the status of English as a global language?

- Ans
- 1. Its wide use in global trade and technology.
 - 2. Its complex grammar and extensive vocabulary.
 - 3. Its use is limited to native English nations.
 - 4. Its ancient origin in early European history.

Question ID : 4410091633795
Option 1 ID : 4410096453270
Option 2 ID : 4410096453271
Option 3 ID : 4410096453273
Option 4 ID : 4410096453272

Q.1 Which is the first step in effective lesson planning according to the principles of lesson planning?

- Ans
- 1. Selecting teaching aids
 - 2. Deciding assessment methods
 - 3. Preparing student activities
 - 4. Setting clear objectives

Question ID : 4410091681879
Option 1 ID : 4410096634887
Option 2 ID : 4410096634888
Option 3 ID : 4410096634889
Option 4 ID : 4410096634886

Q.2 What is a primary significance of Environmental Studies in the context of pedagogy?

- Ans
- 1. It centers solely on historical facts about nature.
 - 2. It builds environmental awareness and responsibility.
 - 3. It promotes economic growth through industrialization.
 - 4. It only provides technical skills for laboratory analysis.

Question ID : 4410091611678
Option 1 ID : 4410096365570
Option 2 ID : 4410096365568
Option 3 ID : 4410096365569
Option 4 ID : 4410096365567

Q.3 What is the main focus of the Grammar Translation Method in teaching English?

- Ans
- 1. Encouraging students to speak English fluently in everyday situations
 - 2. Translating sentences and learning grammar rules using native language
 - 3. Using games and interactive activities to teach vocabulary and grammar
 - 4. Integrating multimedia tools for listening and reading practice effectively

Question ID : 4410091547983
Option 1 ID : 4410096114643
Option 2 ID : 4410096114644
Option 3 ID : 4410096114645
Option 4 ID : 4410096114646

Q.4 English is placed in the school curriculum mainly because it:

- Ans
- 1. Replaces all other languages in schooling
 - 2. Is culturally neutral and context-free
 - 3. Serves as a link language
 - 4. Functions only as an examination subject

Question ID : 4410091583230
Option 1 ID : 4410096254267
Option 2 ID : 4410096254265
Option 3 ID : 4410096254266
Option 4 ID : 4410096254264

Q.5 A teacher instructs students to submit the edited and final version of a report and awards 90% of the grade based strictly on grammatical errors and spelling accuracy. This assessment philosophy primarily aligns with viewing writing as a:

- Ans
- 1. Critical cognitive process.
 - 2. Holistic communication objective.
 - 3. Discourse construction task.
 - 4. Mechanical skill and product.

Question ID : 4410091550996
Option 1 ID : 4410096126241
Option 2 ID : 4410096126239
Option 3 ID : 4410096126242
Option 4 ID : 4410096126240

Q.6 Which teaching approach in Environmental Studies emphasizes connecting different subjects to provide a holistic understanding?

- Ans
- 1. Inclusive approach
 - 2. Conceptual process approach
 - 3. Scientific approach
 - 4. Integrated approach

Question ID : 4410091611695
Option 1 ID : 4410096365634
Option 2 ID : 4410096365632
Option 3 ID : 4410096365631
Option 4 ID : 4410096365633

Q.7 A city plans to develop a new park by integrating local culture, community needs, and natural resources. Which approach to environmental studies does this best illustrate?

- Ans
- 1. Systems approach
 - 2. Teleological approach
 - 3. Environmental deterministic approach
 - 4. Holistic approach

Question ID : 4410091604700
Option 1 ID : 4410096337967
Option 2 ID : 4410096337966
Option 3 ID : 4410096337965
Option 4 ID : 4410096337964

Q.8 In Riverdale School, the administration wishes to measure school effectiveness beyond student test scores. Which approach best reflects comprehensive measurement as described in the context?

- Ans
- 1. Focusing solely on annual board examination results
 - 2. Increasing the number of summative tests each year
 - 3. Ranking students publicly based on exam marks
 - 4. Utilizing portfolios, peer feedback, and value-added models

Question ID : 4410091616584
Option 1 ID : 4410096385249
Option 2 ID : 4410096385246
Option 3 ID : 4410096385248
Option 4 ID : 4410096385247

Q.9 A school syllabus removes separate Science and Social Science sections and organises lessons under themes like "Water" and "Fuel" from daily life. This mainly shows a focus on:

- Ans
- 1. Increasing classroom periods
 - 2. Listing separate subject facts
 - 3. Writing more exam questions
 - 4. Holistic content integration

Question ID : 4410091558802
Option 1 ID : 4410096157596
Option 2 ID : 4410096157593
Option 3 ID : 4410096157595
Option 4 ID : 4410096157594

Q.10 Carroll College's approach to education emphasizes engaging many perspectives. What outcome does this support, based on the mission-centered values and strategic plan?

- Ans
- 1. An environment closed to outside ideas
 - 2. A focus on competition over cooperation
 - 3. A culture of empathy and authentic dialogue
 - 4. A separation of faith and reason

Question ID : 4410091605071
Option 1 ID : 4410096339451
Option 2 ID : 4410096339452
Option 3 ID : 4410096339450
Option 4 ID : 4410096339453

Q.11 Which micro teaching skill is most directly associated with giving clear and precise instructions to students during a lesson?

- Ans
- 1. Skill of reinforcement
 - 2. Skill of explaining
 - 3. Skill of questioning
 - 4. Skill of stimulus variation

Question ID : 4410091646613
Option 1 ID : 4410096502695
Option 2 ID : 4410096502694
Option 3 ID : 4410096502693
Option 4 ID : 4410096502696

Q.12 Lesson planning is primarily executed during which phase of teaching?

- Ans
- 1. Evaluative phase
 - 2. Interactive phase
 - 3. Pre-active phase
 - 4. Post-active phase

Question ID : 4410091551035
Option 1 ID : 4410096126386
Option 2 ID : 4410096126383
Option 3 ID : 4410096126385
Option 4 ID : 4410096126384

Q.13 Which of the following uses different leadership styles depending on the situation and the type of employee that is being supervised?

- Ans
- 1. A leadership approach that modifies behavior according to context and follower capability
 - 2. A leadership approach centered on meeting employees' personal needs first
 - 3. A leadership approach focused primarily on relationship-building and morale
 - 4. A leadership approach that prioritizes long-term organizational culture

Question ID : 4410091548093
Option 1 ID : 4410096115077
Option 2 ID : 4410096115079
Option 3 ID : 4410096115080
Option 4 ID : 4410096115078

Q.14 Social justice is mainly concerned with ____.

- Ans
- 1. Uniform application of punishments
 - 2. Fair distribution of opportunities
 - 3. Strict enforcement of criminal laws
 - 4. Elimination of all social conflicts

Question ID : 4410091584489
Option 1 ID : 4410096259192
Option 2 ID : 4410096259193
Option 3 ID : 4410096259191
Option 4 ID : 4410096259194

Q.15 A principal wants to foster a culture of continuous professional development among teachers. Which action most effectively reflects the role of a pedagogical leader in this context?

- Ans
- 1. Organizing peer observation sessions with reflective discussions
 - 2. Assigning external trainers to conduct isolated workshops
 - 3. Focusing professional development only on administrative skills
 - 4. Purchasing professional development materials for the staffroom

Question ID : 4410091681777
Option 1 ID : 4410096634483
Option 2 ID : 4410096634484
Option 3 ID : 4410096634485
Option 4 ID : 4410096634482

Q.16 An educator is designing a lesson plan that incorporates Bloom's Taxonomy to foster higher-order thinking and aligns with the principle of flexibility. Which step is crucial to ensure adaptability in instructional delivery?

- Ans
- 1. Setting fixed objectives for all learners
 - 2. Relying solely on one assessment method
 - 3. Following a rigid instructional sequence
 - 4. Providing alternate strategies for diverse needs

Question ID : 4410091611768
Option 1 ID : 4410096365911
Option 2 ID : 4410096365912
Option 3 ID : 4410096365914
Option 4 ID : 4410096365913

Q.17 Which of the following best explains a key principle behind integrating English language instruction in a postgraduate curriculum?

- Ans
- 1. It focuses mainly on grammar development for advanced students.
 - 2. It prioritizes literature appreciation over functional language use.
 - 3. It supports academic discourse and critical thinking across disciplines.
 - 4. It emphasizes rote memorization of vocabulary lists.

Question ID : 4410091611693
Option 1 ID : 4410096365628
Option 2 ID : 4410096365629
Option 3 ID : 4410096365627
Option 4 ID : 4410096365630

Q.18 Which type of language assessment is most appropriate for evaluating a learner's ability to organize ideas coherently and express them in written form?

- Ans
- 1. Oral assessment
 - 2. Writing assessment
 - 3. Listening assessment
 - 4. Reading assessment

Question ID : 4410091636115
Option 1 ID : 4410096462422
Option 2 ID : 4410096462421
Option 3 ID : 4410096462424
Option 4 ID : 4410096462423

Q.19 How are social sciences and social studies related?

- Ans
- 1. Social sciences are only taught at the elementary school level
 - 2. Social studies and social sciences are unrelated disciplines
 - 3. Social studies originated from social sciences for school curriculum
 - 4. Social sciences are a subset of social studies at universities

Question ID : 4410091634004
Option 1 ID : 4410096454113
Option 2 ID : 4410096454112
Option 3 ID : 4410096454110
Option 4 ID : 4410096454111

Q.20 A school ensures that every child gets equal learning opportunities regardless of background. This practice promotes:

- Ans
- 1. Preference for high achievers
 - 2. Grouping by social background
 - 3. Classroom competition
 - 4. Values of equality and justice

Question ID : 4410091570139
Option 1 ID : 4410096201559
Option 2 ID : 4410096201560
Option 3 ID : 4410096201557
Option 4 ID : 4410096201558

Section : Discipline5

Q.1 How does the nature of mathematics as a discipline influence its perceived importance in education?

- Ans
- 1. Mathematics minimizes cooperative learning in favor of individual drill practice
 - 2. Mathematics is mainly concerned with chronological facts and descriptive narratives
 - 3. Mathematics primarily stresses rote procedural recall rather than creative thinking
 - 4. Mathematics cultivates analytical reasoning and systematic problem solving

Question ID : 4410091641195
Option 1 ID : 4410096481935
Option 2 ID : 4410096481936
Option 3 ID : 4410096481934
Option 4 ID : 4410096481933

Q.2 Which of the following best explains the nature of mathematics?

- Ans
- 1. It deals only with theoretical proofs with no practical implication
 - 2. It is limited only to numerical calculations and assumptions
 - 3. It develops from concrete experiences to abstract concepts
 - 4. It is unrelated to daily life activities and is used in classroom only

Question ID : 4410091581889
Option 1 ID : 4410096248795
Option 2 ID : 4410096248793
Option 3 ID : 4410096248796
Option 4 ID : 4410096248794

Q.3 Which of the following is an example of recreational mathematics?

- Ans
- 1. Memorizing multiplication tables
 - 2. Solving puzzles like Sudoku
 - 3. Practicing handwriting
 - 4. Reading a history book

Question ID : 4410091624165
Option 1 ID : 4410096415231
Option 2 ID : 4410096415232
Option 3 ID : 4410096415234
Option 4 ID : 4410096415233

Q.4 Which statement reflects a key concept of the nature of science as taught in science education?

- Ans
- 1. Scientific knowledge is subject to change with new evidence
 - 2. Science never changes once established
 - 3. Science education avoids discussing new discoveries
 - 4. Science is based on unchangeable facts

Question ID : 4410091618547
Option 1 ID : 4410096393060
Option 2 ID : 4410096393059
Option 3 ID : 4410096393062
Option 4 ID : 4410096393061

Q.5 A private school reserves 25% of its seats for children from economically weaker sections and children with special needs, as per government mandate. This is an example of which inclusion strategy in Indian education?

- Ans
- 1. Provision of scholarships based on academic performance
 - 2. Enforcement of RTE-mandated private school reservations
 - 3. Adoption of multilingual classroom instruction
 - 4. Implementation of flexible curricula for diverse learners

Question ID : 4410091619207
Option 1 ID : 4410096395699
Option 2 ID : 4410096395698
Option 3 ID : 4410096395697
Option 4 ID : 4410096395696

Q.6 For a research project, graduate students design a rubric to assess peers' intercultural communication. This task best exemplifies which aspect of Bloom's domains?

- Ans
- 1. Receiving in the affective domain
 - 2. Applying knowledge in the cognitive domain
 - 3. Applying evaluation in the cognitive domain
 - 4. Creating in the psychomotor domain

Question ID : 4410091626496
Option 1 ID : 4410096424358
Option 2 ID : 4410096424359
Option 3 ID : 4410096424357
Option 4 ID : 4410096424356

Q.7 Which approach best supports working towards gender equality in schools?

- Ans
- 1. Assigning tasks based on gender roles
 - 2. Ignoring gender differences in classroom
 - 3. Implementing gender-sensitive policies and practices
 - 4. Promoting single-gender classrooms exclusively

Question ID : 4410091639004
Option 1 ID : 4410096473583
Option 2 ID : 4410096473582
Option 3 ID : 4410096473581
Option 4 ID : 4410096473584

Q.8 A teacher uses group activities where children from diverse backgrounds work together. This helps in:

- Ans
- 1. Creating barriers
 - 2. Avoiding diversity
 - 3. Addressing inequality in classrooms
 - 4. Increasing competition

Question ID : 4410091570309
Option 1 ID : 4410096202221
Option 2 ID : 4410096202222
Option 3 ID : 4410096202224
Option 4 ID : 4410096202223

Q.9 What is one main goal of working towards gender equality in schools?

- Ans
- 1. Allowing only one gender to participate
 - 2. Providing equal opportunities to all genders
 - 3. Focusing only on academic subjects
 - 4. Encouraging competition among students

Question ID : 4410091624302
Option 1 ID : 4410096415737
Option 2 ID : 4410096415735
Option 3 ID : 4410096415738
Option 4 ID : 4410096415736

Q.10 What is a key strategy for addressing inequality and diversity in Indian classrooms?

- Ans
- 1. Ignoring cultural backgrounds in lessons
 - 2. Implementing differentiated instruction
 - 3. Using a single teaching method for all students
 - 4. Assigning students to separate classrooms for diversity

Question ID : 4410091618660
Option 1 ID : 4410096393511
Option 2 ID : 4410096393512
Option 3 ID : 4410096393513
Option 4 ID : 4410096393514

Q.11 A school introduces early screening and remedial classes for children with reading and writing difficulties. Which educational policy framework directly encourages this approach?

- Ans
- 1. RPWD Act 2016
 - 2. IEP
 - 3. NIMHANS/DALI
 - 4. NCF 2005/RTE

Question ID : 4410091619218
Option 1 ID : 4410096395740
Option 2 ID : 4410096395743
Option 3 ID : 4410096395742
Option 4 ID : 4410096395741

Q.12 In Bloom's taxonomy, which domain focuses primarily on the development of physical skills and coordination?

- Ans
- 1. Affective
 - 2. Psychomotor
 - 3. Cognitive
 - 4. Theoretical

Question ID : 4410091687771
Option 1 ID : 4410096657871
Option 2 ID : 4410096657872
Option 3 ID : 4410096657870
Option 4 ID : 4410096657873

Q.13 When assessing language skills, why is a combination of observation, oral tests, and written assignments recommended?

- Ans
- 1. It limits assessment to factual recall
 - 2. It evaluates multiple competencies
 - 3. It ensures only advanced grammar is tested
 - 4. It focuses exclusively on handwriting practice

Question ID : 4410091641193
Option 1 ID : 4410096481928
Option 2 ID : 4410096481925
Option 3 ID : 4410096481926
Option 4 ID : 4410096481927

Q.14 A doctor reviews a partial list of symptoms and selects the most likely diagnosis. Which type of reasoning is applied?

- Ans
- 1. Abductive reasoning
 - 2. Inductive reasoning
 - 3. Deductive reasoning
 - 4. Tautological reasoning

Question ID : 4410091606458
Option 1 ID : 4410096344840
Option 2 ID : 4410096344842
Option 3 ID : 4410096344841
Option 4 ID : 4410096344843

Q.15 A teacher wants to encourage critical thinking during a science lesson. Which use of a science kit would best achieve this goal?

- Ans
- 1. Asking students to copy answers from the kit manual
 - 2. Guiding students to design their own experiments using the kit
 - 3. Limiting students to pre-written instructions only
 - 4. Demonstrating experiments without student participation

Question ID : 4410091640299
Option 1 ID : 4410096478395
Option 2 ID : 4410096478394
Option 3 ID : 4410096478396
Option 4 ID : 4410096478397

Q.16 Which tool is commonly used in recreational mathematics to create patterns?

- Ans
- 1. Calculator
 - 2. Protractor
 - 3. Tangram
 - 4. Abacus

Question ID : 4410091637833
Option 1 ID : 4410096468897
Option 2 ID : 4410096468896
Option 3 ID : 4410096468894
Option 4 ID : 4410096468895

Q.17 Effective listening in educational settings most directly contributes to which outcome?

- Ans
- 1. Faster delivery of instructional content by teachers
 - 2. Accurate interpretation of verbal and non-verbal messages
 - 3. Reduced dependence on written communication materials
 - 4. Increased authority of the speaker over the listener

Question ID : 4410091603115
Option 1 ID : 4410096331656
Option 2 ID : 4410096331657
Option 3 ID : 4410096331658
Option 4 ID : 4410096331659

Q.18 Students create posters on saving water and conduct tree-planting drives. This activity belongs to:

- Ans
- 1. Debate elimination rounds
 - 2. Sports competitions
 - 3. Science and eco-club activities
 - 4. Assembly routine

Question ID : 4410091570285
Option 1 ID : 4410096202132
Option 2 ID : 4410096202129
Option 3 ID : 4410096202130
Option 4 ID : 4410096202131

Q.19 What is the first step in the assessment process for identifying a child with special needs in an inclusive classroom?

- Ans
- 1. Assigning special curriculum immediately
 - 2. Observing the child's learning and behavior
 - 3. Informing the parents about placement
 - 4. Conducting a formal medical diagnosis

Question ID : 4410091688030
Option 1 ID : 4410096658907
Option 2 ID : 4410096658906
Option 3 ID : 4410096658909
Option 4 ID : 4410096658908

Q.20 A teacher consciously eliminates gendered derogatory remarks and avoids sex-role behavior cues in classroom interaction. Which primary mechanism of gender construction is being challenged?

- Ans
- 1. Productive labor division
 - 2. Sex-role rigidity
 - 3. Gender socialization
 - 4. Biological determination

Question ID : 4410091551669
Option 1 ID : 4410096129314
Option 2 ID : 4410096129311
Option 3 ID : 4410096129313
Option 4 ID : 4410096129312

