



GOVT. OF NCT OF DELHI
Delhi Subordinate Services Selection Board
FC-18, Institutional Area, Karkardooma, Delhi – 110092.
www.dsssb.delhigovt.nic.in

Participant ID	[REDACTED]
Participant Name	[REDACTED]
Test Center Name	Aadarsh Pariksha Kendra CENTER C - Gate No 2 - Noida Sector 64
Test Date	17/02/2026
Test Time	5:00 PM - 7:00 PM
Subject	Assistant Teacher Primary

Section : General Intelligence and Reasoning Ability

Q.1 What will come in the place of '?' in the following equation, if '+' and '÷' are interchanged and '-' and 'x' are interchanged?

$$46 + 2 \times 4 - 6 \div 20 = ?3954$$

- Ans
- 1. 23
 - 2. 19
 - 3. 17
 - 4. 27

Question ID : 441009554419
Option 1 ID : 4410092172992
Option 2 ID : 4410092172991
Option 3 ID : 4410092172990
Option 4 ID : 4410092172993

Adda247

Test Prime

ALL EXAMS, ONE SUBSCRIPTION



1,00,000+
Mock Tests



**Personalised
Report Card**



**Unlimited
Re-Attempt**



600+
Exam Covered



25,000+ Previous
Year Papers



500%
Refund



ATTEMPT FREE MOCK NOW

Q.2 S, U, B, M, E, R and G are sitting around a circular table facing the centre of the table. B sits to the immediate left of M. U sits to the immediate left of E. E sits second to the left of G. R sits third to the left of M. Who sits fourth to the right of S?

- Ans
- 1. G
 - 2. B
 - 3. M
 - 4. E

Question ID : 4410091618807
Option 1 ID : 4410096394103
Option 2 ID : 4410096394100
Option 3 ID : 4410096394101
Option 4 ID : 4410096394102

Q.3 Based on the English alphabetical order, three of the following four letter-cluster pairs are alike in a certain way and thus form a group. Which is the one that DOES NOT belong to that group?
(Note: The odd one out is not based on the number of consonants/vowels or their position in the letter-cluster.)

- Ans
- 1. TC - ZH
 - 2. UP - AU
 - 3. YR - EV
 - 4. AN - GS

Question ID : 441009782193
Option 1 ID : 4410093082778
Option 2 ID : 4410093082776
Option 3 ID : 4410093082777
Option 4 ID : 4410093082775

Q.4 Based on the English alphabetical order, three of the following four letter-cluster pairs are alike in a certain way and thus form a group. Which is the one that does not belong to that group?
(Note: The odd one out is not based on the number of consonants/vowels or their position in the letter cluster.)⁴⁰⁹⁵

- Ans
- 1. PQ - RU
 - 2. IJ - KN
 - 3. VW - XZ
 - 4. DE - FI

Question ID : 441009790209
Option 1 ID : 4410093114835
Option 2 ID : 4410093114836
Option 3 ID : 4410093114837
Option 4 ID : 4410093114838

Q.5 The position(s) of how many letters will remain unchanged if each letter in the word FRIEND is arranged in the English alphabetical order?

- Ans
- 1. None
 - 2. Two
 - 3. One
 - 4. Three

Question ID : 4410091655136
Option 1 ID : 4410096535509
Option 2 ID : 4410096535511
Option 3 ID : 4410096535510
Option 4 ID : 4410096535512

Q.6 In a certain code language, 'LEAP' is coded as '9875' and 'LEAD' is coded as '3897'. What is the code for 'D' in the given code language?

- Ans
- 1. 9
 - 2. 8
 - 3. 5
 - 4. 3

Question ID : 4410091518954
Option 1 ID : 4410095999072
Option 2 ID : 4410095999073
Option 3 ID : 4410095999071
Option 4 ID : 4410095999070

Q.7 The position(s) of how many letters will remain unchanged if each letter in the word PRAYING is arranged in the English alphabetical order?⁹⁸¹⁶

- Ans
- 1. Three
 - 2. One
 - 3. Two
 - 4. Zero

Question ID : 441009763971
Option 1 ID : 4410093009880
Option 2 ID : 4410093009878
Option 3 ID : 4410093009879
Option 4 ID : 4410093009877

Q.8 Refer to the given letter series and answer the question that follows. Counting to be done from left to right only.

(Left) B K C A L Q R V G T N J E N E J W Y C G R L A M I U (Right)

How many such consonants are there, each of which is immediately preceded by a consonant and also immediately followed by a vowel?

Ans 1. Three

2. One

3. None

4. Two

Question ID : 441009792657

Option 1 ID : 4410093124630

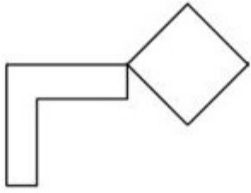
Option 2 ID : 4410093124628

Option 3 ID : 4410093124627

Option 4 ID : 4410093124629

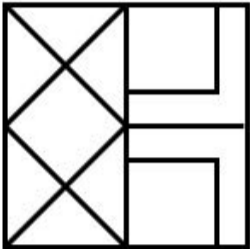


Q.9 Select the option in which the given figure is embedded (rotation is NOT allowed).

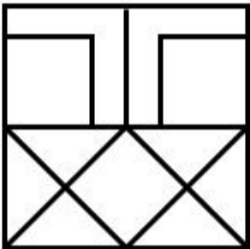


Ans

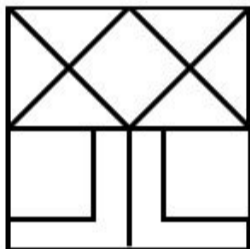
✗ 1.



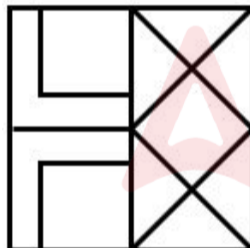
✗ 2.



✗ 3.



✓ 4.



Question ID : 441009906456
 Option 1 ID : 4410093579634
 Option 2 ID : 4410093579633
 Option 3 ID : 4410093579632
 Option 4 ID : 4410093579635

Q.10 1003 is related to 274 following a certain logic. Following the same logic, 987 is related to 258. To which of the following is 1105 related to, following the same logic? (NOTE : Operations should be performed on the whole numbers, without breaking down the numbers into its constituent digits. E.g. 13 – Operations on 13 such as adding /subtracting /multiplying etc. to 13 can be performed. Breaking down 13 into 1 and 3 and then performing mathematical operations on 1 and 3 is not allowed.)2005

- Ans
- 1. 307
 - 2. 376
 - 3. 367
 - 4. 365

Question ID : 441009552470
Option 1 ID : 4410092165194
Option 2 ID : 4410092165197
Option 3 ID : 4410092165195
Option 4 ID : 4410092165196

Q.11 What should come in place of the question mark (?) in the given series?
14, 23, 32, 41, 50, ?

- Ans
- 1. 59
 - 2. 57
 - 3. 61
 - 4. 63

Question ID : 441009216190
Option 1 ID : 441009848800
Option 2 ID : 441009848799
Option 3 ID : 441009848801
Option 4 ID : 441009848802

Q.12 What will come in place of the question mark (?) in the following equation if '+' and '-' are interchanged and 'x' and '÷' are interchanged?

$$424 \div 2 + 966 \times 3 - 23 = ?$$

- Ans
- 1. 549
 - 2. 545
 - 3. 645
 - 4. 649

Question ID : 441009348646
Option 1 ID : 4410091360903
Option 2 ID : 4410091360902
Option 3 ID : 4410091360904
Option 4 ID : 4410091360905

Q.13 Seven boxes, F, I, L, T, E, R and S, are kept one over the other but not necessarily in the same order. Only R is kept above E. Only two boxes are kept between E and T. Only I is kept below L. F is not kept immediately above T. How many boxes are kept between S and I?

- Ans
- 1. Three
 - 2. Four
 - 3. One
 - 4. Two

Question ID : 4410091518830
Option 1 ID : 4410095998600
Option 2 ID : 4410095998601
Option 3 ID : 4410095998598
Option 4 ID : 4410095998599

Q.14 L is the mother of E. E is the sister of M. O is the father of N. N is the husband of M. How is O related to L?

- Ans
- 1. Daughter's husband's father
 - 2. Daughter's husband
 - 3. Daughter's husband's brother
 - 4. Daughter's father

Question ID : 4410091614520
Option 1 ID : 4410096376893
Option 2 ID : 4410096376895
Option 3 ID : 4410096376894
Option 4 ID : 4410096376896

Q.15 Each of H, U, S, B, A, N and D has an exam on a different day of a week starting from Monday and ending on Sunday of the same week. Only three people have exams between B and H. Only three people have exams between A and S. D has an exam on some day before U and on some day after N. Only S has an exam after H. How many people have exam(s) after A?

- Ans
- 1. One
 - 2. Two
 - 3. Three
 - 4. Four

Question ID : 4410091518870
Option 1 ID : 4410095998754
Option 2 ID : 4410095998755
Option 3 ID : 4410095998756
Option 4 ID : 4410095998757

Q.16 Each of A, B, C, D, I, J and K has an exam on a different day of a week starting from Monday and ending on Sunday of the same week. Only three people have exams between C and I. Only three people have exams between J and D. B has exam on some day before K and on some day after A. Only D has exam after I. How many people have exams after J?

- Ans
- 1. Three
 - 2. Two
 - 3. One
 - 4. Four

Question ID : 4410091614368
Option 1 ID : 4410096376291
Option 2 ID : 4410096376290
Option 3 ID : 4410096376289
Option 4 ID : 4410096376292

Q.17 Refer to the following letter series and answer the question that follows. Counting to be done from left to right only.

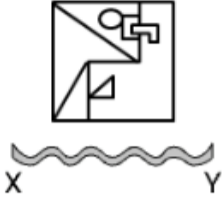
(Left) EDUJYHVBGTIOJUEDSAIBCADEYIOLBSMC (Right)

How many such vowel are there each of which is immediately preceded by a consonant and also immediately followed by a consonant?¹⁴⁰⁴

- Ans
- 1. One
 - 2. Three
 - 3. None
 - 4. Two

Question ID : 441009787530
Option 1 ID : 4410093104120
Option 2 ID : 4410093104122
Option 3 ID : 4410093104119
Option 4 ID : 4410093104121

Q.18 If the water source is placed along X-Y, as shown in the figure, which of the given options will be the water reflection of the given figure?



Ans

- ✗ 1.
- ✗ 2.
- ✓ 3.
- ✗ 4.

Question ID : 4410091614512
 Option 1 ID : 4410096376868
 Option 2 ID : 4410096376865
 Option 3 ID : 4410096376866
 Option 4 ID : 4410096376867

Q.19 What should come in place of ? in the given series based on the English alphabetical order?

SWUN XBZS CGEX HLJC ?

- ✗ 1. MQSW
- ✗ 2. MHYU
- ✓ 3. MQOH
- ✗ 4. MOHQ

Question ID : 4410091614442
 Option 1 ID : 4410096376588
 Option 2 ID : 4410096376587
 Option 3 ID : 4410096376585
 Option 4 ID : 4410096376586

Q.20 In the following triads, each group of letters is related to the subsequent one following a certain logic. Select from the given options, the one which follows the same logic.

AMID - MIAD - DIMA
EAST - ASET - TSAE¹³¹¹⁹

- Ans
- 1. FROM - ROFM - ROMF
 - 2. WEAR - EAWR - RAEW
 - 3. VAST - AVST - TASV
 - 4. OPEN - OEPN - NEPO

Question ID : 441009767268
Option 1 ID : 4410093023068
Option 2 ID : 4410093023065
Option 3 ID : 4410093023067
Option 4 ID : 4410093023066

Section : General Awareness

Q.1 In which of the following years did NABARD initiate the pilot project for linking 500 groups in India?

- Ans
- 1. 1995
 - 2. 1992
 - 3. 1990
 - 4. 2000

Question ID : 441009628149
Option 1 ID : 4410092466750
Option 2 ID : 4410092466749
Option 3 ID : 4410092466748
Option 4 ID : 4410092466751

Q.2 What was the title of the National Conference organised on Human Rights Day 2025?

- Ans
- 1. Dignity, Freedom and Justice for All
 - 2. Ensuring Everyday Essentials: Public Services and Dignity for All
 - 3. Human Rights 75: Public Services and Dignity for All
 - 4. Equality and Inclusion

Question ID : 4410091564734
Option 1 ID : 4410096180507
Option 2 ID : 4410096180510
Option 3 ID : 4410096180508
Option 4 ID : 4410096180509

Q.3 Match List I with List II

List I (Industry) List II (Location)

A. Visveswaraya Iron and Steel Plant I. Hirakud
B. Indian Aluminium Company Ltd. II. Sindri
C. Fertiliser Corporation of India Ltd. III. Pimpri
D. Hindustan Antibiotics Ltd. IV. Bhadravati

- Ans
- 1. A - IV, B - I, C - II, D - III
 - 2. A - II, B - IV, C - I, D - III
 - 3. A - IV, B - II, C - I, D - III
 - 4. A - I, B - II, C - III, D - IV

Question ID : 441009638145
Option 1 ID : 4410092506726
Option 2 ID : 4410092506723
Option 3 ID : 4410092506724
Option 4 ID : 4410092506725

Q.4 The concept of rural development includes the provision of basic services such as sanitation, water and electricity. What is the main objective of the Swachh Bharat Mission (Gramin)?

- Ans
- 1. Open defecation free villages
 - 2. Providing irrigation
 - 3. Rural electrification
 - 4. Providing gas connections

Question ID : 441009883736
Option 1 ID : 4410093488912
Option 2 ID : 4410093488913
Option 3 ID : 4410093488911
Option 4 ID : 4410093488910

Q.5 Which of the following buildings in Fatehpur Sikri is a fine example of ancient Indian architecture?

- Ans
- 1. Jodha Bai Palace
 - 2. Dash Mahal
 - 3. Hawa Mahal
 - 4. Raja Mahal

Question ID : 441009605613
Option 1 ID : 4410092377571
Option 2 ID : 4410092377572
Option 3 ID : 4410092377569
Option 4 ID : 4410092377570

Q.6 The Kailasha monument at Ellora (near Aurangabad, Maharashtra), viewed as a grand specimen of Rashtrakuta artistry, was erected under the patronage of which of the following kings?

- Ans
- 1. Indra Varma
 - 2. Vikramaditya
 - 3. Krishna II
 - 4. Krishna I

Question ID : 4410091551327
Option 1 ID : 4410096127633
Option 2 ID : 4410096127634
Option 3 ID : 4410096127632
Option 4 ID : 4410096127631

Q.7 Which Indian shooter secured her second individual gold medal in the women's 25 m standard pistol event at the ISSF Junior World Championship in 2024?

- Ans
- 1. Apurvi Chandela
 - 2. Manu Bhaker
 - 3. Heena Sidhu
 - 4. Divanshi

Question ID : 441009257818
Option 1 ID : 4410091005111
Option 2 ID : 4410091005109
Option 3 ID : 4410091005108
Option 4 ID : 4410091005110

Q.8 Which of the following is NOT a colligative property?

- Ans
- 1. Freezing point depression
 - 2. Relative lowering of vapour pressure
 - 3. Elevation of freezing point
 - 4. Boiling point elevation

Question ID : 441009616201
Option 1 ID : 4410092418974
Option 2 ID : 4410092418975
Option 3 ID : 4410092418976
Option 4 ID : 4410092418973

Q.9 A population pyramid is used to show:

- Ans
- 1. Distribution of agricultural land
 - 2. Urban-rural migration patterns
 - 3. Age and sex structure of the population
 - 4. Population density of countries

Question ID : 441009637265
Option 1 ID : 4410092503205
Option 2 ID : 4410092503206
Option 3 ID : 4410092503204
Option 4 ID : 4410092503203

Q.10 Who among the following was the founder of Chalukya's dynasty?

- Ans
- 1. Kirtivarman I
 - 2. Rajendra II
 - 3. Pulakeshin I
 - 4. Vikramaditya I

Question ID : 44100921922
Option 1 ID : 44100987411
Option 2 ID : 44100987414
Option 3 ID : 44100987412
Option 4 ID : 44100987413

Q.11 Which of the following statements is correct about the relationship of the State Council of Ministers with the Governor?

- Ans
- 1. They advise the Governor on governmental affairs.
 - 2. They assist the Governor in drafting state laws.
 - 3. They supervise the Governor's actions.
 - 4. They hold office at the pleasure of the Governor.

Question ID : 441009635614
Option 1 ID : 4410092496605
Option 2 ID : 4410092496604
Option 3 ID : 4410092496606
Option 4 ID : 4410092496603

Q.12 Electric and magnetic fields are regarded as-----

- Ans
- 1. Scalar quantities because they have only magnitude
 - 2. Non-physical entities without measurable effects
 - 3. Independent phenomena with no relation
 - 4. Vector quantities because they have both magnitude and direction

Question ID : 441009509258
Option 1 ID : 4410091992190
Option 2 ID : 4410091992193
Option 3 ID : 4410091992191
Option 4 ID : 4410091992192

Q.13 The Union Budget 2025-2026 of India was presented by:

- Ans
- 1. Piyush Goyal
 - 2. Rajnath Singh
 - 3. Amit Shah
 - 4. Nirmala Sitharaman

Question ID : 4410091564737
Option 1 ID : 4410096180520
Option 2 ID : 4410096180522
Option 3 ID : 4410096180521
Option 4 ID : 4410096180519

Q.14 Which peace agreement, signed on 26 October 2025, aimed to settle the border dispute between two Southeast Asian nations?

- Ans
- 1. Schengen Peace Agreement
 - 2. Kuala Lumpur Peace Accord
 - 3. Kyoto Peace Protocol
 - 4. Minsk Peace Protocol

Question ID : 4410091556403
Option 1 ID : 4410096148184
Option 2 ID : 4410096148182
Option 3 ID : 4410096148183
Option 4 ID : 4410096148185

Q.15 Which Article of the Indian Constitution says that , there shall be a Minister in charge of tribal welfare in the States of Chhattisgarh, Jharkhand, Madhya Pradesh and Orissa?

- Ans
- 1. Article 164
 - 2. Article 166
 - 3. Article 168
 - 4. Article 170

Question ID : 441009502255
Option 1 ID : 4410091964190
Option 2 ID : 4410091964191
Option 3 ID : 4410091964192
Option 4 ID : 4410091964193

Q.16 Dadabhai Naoroji developed an economic explanation that became a key Indian argument against British domination; this idea is known as which of the following?

- Ans
- 1. Wealth-Export hypothesis
 - 2. Drain-of-Wealth theory
 - 3. Imperial Drain concept
 - 4. Economic Drain thesis

Question ID : 4410091551261
Option 1 ID : 4410096127341
Option 2 ID : 4410096127339
Option 3 ID : 4410096127342
Option 4 ID : 4410096127340

Q.17 Which of the following sculptures is a famous example of Harappan bronze art?

- Ans
- 1. Mother Goddess
 - 2. Bearded Priest
 - 3. Dancing Girl
 - 4. Bull Seal

Question ID : 441009861397
Option 1 ID : 4410093398634
Option 2 ID : 4410093398637
Option 3 ID : 4410093398635
Option 4 ID : 4410093398636

Q.18 Which of the following indices does the Government of India employ to assess the employment situation in the country?

- Ans
- 1. Worker Population Ratio (WPR)
 - 2. Human Development Index (HDI)
 - 3. Gini Coefficient
 - 4. Consumer Price Index (CPI)

Question ID : 441009637391
Option 1 ID : 4410092503709
Option 2 ID : 4410092503708
Option 3 ID : 4410092503710
Option 4 ID : 4410092503707

Q.19 Which of the following is the main objective of the PM SVANidhi scheme?

- Ans
- 1. To provide support to Old Age Persons
 - 2. To provide financial support to street vendors for their business growth
 - 3. To provide accommodation support to shelterless people
 - 4. To provide free education to street vendors' children

Question ID : 441009501516
Option 1 ID : 4410091961236
Option 2 ID : 4410091961235
Option 3 ID : 4410091961237
Option 4 ID : 4410091961234

Q.20 The Khelo India Para Games 2025 took place in _____.

- Ans
- 1. Bengaluru
 - 2. Jaipur
 - 3. Lucknow
 - 4. New Delhi

Question ID : 441009285946
Option 1 ID : 4410091110878
Option 2 ID : 4410091110880
Option 3 ID : 4410091110881
Option 4 ID : 4410091110879

Q.1 The average weight of a family of five members whose weights are 40 kg, 49 kg, 57 kg, 77 kg and 36 kg is:

- Ans
- 1. 51.8 kg
 - 2. 53.8 kg
 - 3. 52.8 kg
 - 4. 50.8 kg

Question ID : 441009582033
Option 1 ID : 4410092283258
Option 2 ID : 4410092283261
Option 3 ID : 4410092283259
Option 4 ID : 4410092283260

Q.2 The selling price of 25 books is equal to the cost price of 27 books. Find the loss or gain percentage.

- Ans
- 1. $\frac{100}{2}$ % gain
 - 2. 8% gain
 - 3. 8% loss
 - 4. $\frac{100}{2}$ % loss

Question ID : 441009209204
Option 1 ID : 441009822102
Option 2 ID : 441009822099
Option 3 ID : 441009822101
Option 4 ID : 441009822100

Q.3 A boat can travel at a speed of 21 km/hr in still water. If the speed of the stream is 3 km/hr, find the time taken by the boat to go 48 km downstream.

- Ans
- 1. 2 hours 20 minutes
 - 2. 2 hours
 - 3. 3 hours 10 minutes
 - 4. 3 hours

Question ID : 441009209535
Option 1 ID : 441009823423
Option 2 ID : 441009823424
Option 3 ID : 441009823425
Option 4 ID : 441009823426

Q.4 Find the simple interest (in ₹) on ₹3500 as a sum borrowed at 7% per year rate of interest for 6 years.1433

- Ans
- 1. 1410
 - 2. 1430
 - 3. 1510
 - 4. 1470

Question ID : 441009852715
Option 1 ID : 4410093363834
Option 2 ID : 4410093363835
Option 3 ID : 4410093363833
Option 4 ID : 4410093363832

Q.5 If $x^3y : xy :: xy : a$, then which of the options below gives the value of a?

- Ans
- 1. $\frac{y^2}{x}$
 - 2. $\frac{y}{x}$
 - 3. $\frac{y}{x^2}$
 - 4. $\frac{y^2}{x^2}$

Question ID : 441009194373
Option 1 ID : 441009765441
Option 2 ID : 441009765439
Option 3 ID : 441009765440
Option 4 ID : 441009765442

Q.6 Find the diameter of a sphere whose surface area is $81\pi \text{ cm}^2$.

- Ans
- 1. 10 cm
 - 2. 9 cm
 - 3. 8 cm
 - 4. 11 cm

Question ID : 4410098430
Option 1 ID : 44100933454
Option 2 ID : 44100933453
Option 3 ID : 44100933452
Option 4 ID : 44100933455

Q.7 The HCF and the LCM of two numbers are 18 and 360, respectively. If one of the numbers is 90, find the other one.

- Ans
- 1. 100
 - 2. 5
 - 3. 72
 - 4. 45

Question ID : 441009125513
Option 1 ID : 441009498896
Option 2 ID : 441009498898
Option 3 ID : 441009498895
Option 4 ID : 441009498897

Q.8 By how much is 30% of 80 greater than 20% of 50?5756

- Ans
- 1. 16
 - 2. 14
 - 3. 9
 - 4. 11

Question ID : 441009857038
Option 1 ID : 4410093381127
Option 2 ID : 4410093381124
Option 3 ID : 4410093381125
Option 4 ID : 4410093381126

Q.9 Given that $22^{0.32} = x$, $22^{0.89} = y$ and $x^z = y^8$, then the value of z is close to:

- Ans
- 1. 24.31
 - 2. 22.25
 - 3. 21.02
 - 4. 25.69

Question ID : 441009913043
Option 1 ID : 4410093606425
Option 2 ID : 4410093606423
Option 3 ID : 4410093606426
Option 4 ID : 4410093606424

Q.10 In what ratio must a grocer mix two varieties of pulses costing ₹105 and ₹120 per kg, respectively, to get a mixture worth ₹106.50 kg?

- Ans
- 1. 9 : 1
 - 2. 7 : 1
 - 3. 1 : 5
 - 4. 5 : 1

Question ID : 441009309965
Option 1 ID : 4410091206371
Option 2 ID : 4410091206370
Option 3 ID : 4410091206368
Option 4 ID : 4410091206369

Q.11 X and Y are partners in a business. X puts ₹85,737 and Y puts ₹57,158. X receives 8% of the profit for managing the business and the rest is divided in proportion to their capital. What does X get out of a profit of ₹37,875?

- Ans
- 1. ₹23,892
 - 2. ₹23,889
 - 3. ₹23,937
 - 4. ₹23,979

Question ID : 441009898426
Option 1 ID : 4410093547777
Option 2 ID : 4410093547776
Option 3 ID : 4410093547774
Option 4 ID : 4410093547775

Q.12 Pipe A can fill a tank in 45 minutes, while pipe B takes an hour to fill it up. Pipe A is opened first and starts filling the tank. After 18 minutes, pipe B is also opened. How many more minutes (rounded off to the next minute) are required to fill the tank completely?

- Ans
- 1. 18 minutes
 - 2. 10 minutes
 - 3. 12 minutes
 - 4. 16 minutes

Question ID : 441009194722
Option 1 ID : 441009766836
Option 2 ID : 441009766838
Option 3 ID : 441009766837
Option 4 ID : 441009766835

Q.13 An article is marked at ₹1,620 by a shopkeeper. He offers a discount of 10% on the marked price and still earns a profit of 20% on the cost price. Find the cost price of the article.

- Ans
- 1. ₹1,251
 - 2. ₹1,278
 - 3. ₹1,215
 - 4. ₹1,198

Question ID : 4410091622413
Option 1 ID : 4410096408424
Option 2 ID : 4410096408426
Option 3 ID : 4410096408425
Option 4 ID : 4410096408427

Q.14 A metal pipe is 42 cm long. The inner diameter of its cross-section is 6 cm. The outer diameter is 6.4 cm. Its inner curved surface area is:

$$\left(\text{Use } \pi = \frac{22}{7} \right)$$

- Ans
- 1. 528 cm²
 - 2. 892 cm²
 - 3. 792 cm²
 - 4. 968 cm²

Question ID : 441009621334
Option 1 ID : 4410092439468
Option 2 ID : 4410092439470
Option 3 ID : 4410092439469
Option 4 ID : 4410092439471

Q.15 A garrison of 1204 men has provisions for 24 days. How long (in days) will the provisions last if the garrison is increased to 2064 men?

- Ans
- 1. 15
 - 2. 16
 - 3. 13
 - 4. 14

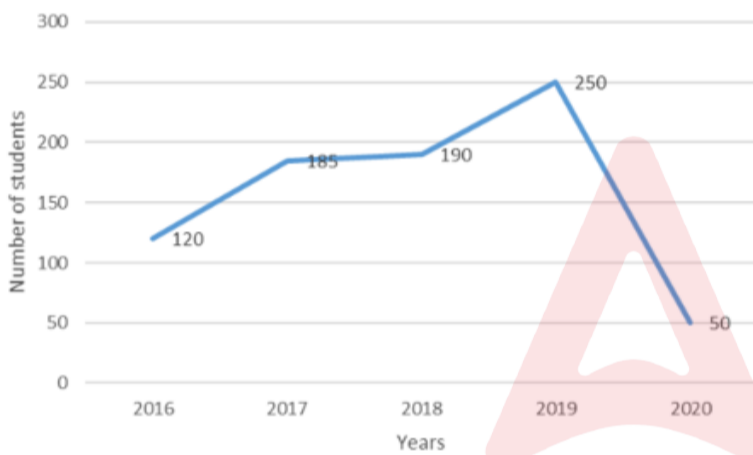
Question ID : 441009522874
Option 1 ID : 4410092046917
Option 2 ID : 4410092046918
Option 3 ID : 4410092046916
Option 4 ID : 4410092046915

Q.16 A man sold two articles for ₹1,200 each. On one he gained 25% and on the other he lost 25%. What is his total profit or loss?

- Ans
- 1. Loss of ₹160
 - 2. Profit of ₹80
 - 3. Neither profit nor loss
 - 4. Loss of ₹80

Question ID : 4410091622210
 Option 1 ID : 4410096407630
 Option 2 ID : 4410096407631
 Option 3 ID : 4410096407628
 Option 4 ID : 4410096407629

Q.17 The following line graph shows the number of students who joined a famous school in the academic years 2016, 2017, 2018, 2019 and 2020. Find the approximate percentage increase in the number of students from the year 2018 to 2019.



- Ans
- 1. 66.6%
 - 2. 21%
 - 3. 75%
 - 4. 31.5%

Question ID : 441009364133
 Option 1 ID : 4410091422783
 Option 2 ID : 4410091422784
 Option 3 ID : 4410091422782
 Option 4 ID : 4410091422785

Q.18 David invested ₹57,500 in a bank. In two years how much compound interest (in ₹) will he get, considering annual compounding, if the rate of interest for the first year was 4% per annum and the rate for the second year was 3% per annum more than the first year?

- Ans
- 1. 6,486
 - 2. 6,736
 - 3. 6,136
 - 4. 6,286

Question ID : 441009573220
Option 1 ID : 4410092248000
Option 2 ID : 4410092248003
Option 3 ID : 4410092248002
Option 4 ID : 4410092248001

Q.19 The sides of a rectangular field are 198 m and 175 m long. Its area is equal to the area of a circular field. What is the perimeter (in m) of the circular field?

$$\left(\text{Take } \pi = \frac{22}{7} \right)$$

- Ans
- 1. 667
 - 2. 654
 - 3. 660
 - 4. 658

Question ID : 441009621826
Option 1 ID : 4410092441438
Option 2 ID : 4410092441439
Option 3 ID : 4410092441436
Option 4 ID : 4410092441437

Q.20 A car travels from city A to B. It covers the first 30% of the total distance at 40 km/h, the next 40% at 60 km/h, and the remaining distance at a speed which is 20% more than the average speed of the entire journey. If the total distance is 250 km, find the average speed (in km/h, and rounded off to the nearest integer) of the car for the whole journey.

- Ans
- 1. 53
 - 2. 52
 - 3. 54
 - 4. 51

Question ID : 4410091622236
Option 1 ID : 4410096407735
Option 2 ID : 4410096407734
Option 3 ID : 4410096407733
Option 4 ID : 4410096407732

Section : English Language and Comprehension

Q.1 Choose the misspelt word in the sentence.

The new intern was extremely knowledgeable, despite his young age.

- Ans
- 1. extremly
 - 2. intern
 - 3. knowledgeable
 - 4. young

Question ID : 4410091122169
Option 1 ID : 4410094424228
Option 2 ID : 4410094424227
Option 3 ID : 4410094424229
Option 4 ID : 4410094424230

Q.2 Choose the option that best completes the sentence using an appropriate adverb.
She typed the report _____ to meet the submission deadline.

- Ans
- 1. neatly
 - 2. efficiently
 - 3. quickly
 - 4. accurately

Question ID : 4410091122864
Option 1 ID : 4410094427020
Option 2 ID : 4410094427017
Option 3 ID : 4410094427018
Option 4 ID : 4410094427019

Q.3 Substitute the underlined part of the following sentence by choosing the correct proverb.
If you want something done, speak up! After all, the loudest complainer gets the attention.

- Ans
- 1. the squeaky wheel gets the grease
 - 2. the early bird catches the worm
 - 3. the pen is mightier than the sword
 - 4. every cloud has a silver lining

Question ID : 4410091132119
Option 1 ID : 4410094463877
Option 2 ID : 4410094463876
Option 3 ID : 4410094463879
Option 4 ID : 4410094463878

Q.4 Choose the correctly spelled word that replaces the misspelled word in the sentence below.

The principal addressed the issue of indisciplin firmly during the assembly.

- Ans
- 1. asembly
 - 2. indisciplin
 - 3. addressed
 - 4. principle

Question ID : 4410091129036
Option 1 ID : 4410094451693
Option 2 ID : 4410094451692
Option 3 ID : 4410094451691
Option 4 ID : 4410094451690

Q.5 Select the most appropriate option to fill in the blank.

After a lot of discussion, they finally decided to _____ the hatchet and end their differences.

- Ans
- 1. fix
 - 2. resolve
 - 3. bury
 - 4. settle

Question ID : 441009823522
Option 1 ID : 4410093248177
Option 2 ID : 4410093248176
Option 3 ID : 4410093248175
Option 4 ID : 4410093248174

Q.6 Rearrange the following segments to form a coherent statement.

(P) but by taking a rickshaw,
(Q) she missed the morning bus,
(R) showing her punctuality
(S) she managed to reach school on time,

- Ans
- 1. PRSQ
 - 2. QPSR
 - 3. PQRS
 - 4. RSPQ

Question ID : 4410091313997
Option 1 ID : 4410095187689
Option 2 ID : 4410095187687
Option 3 ID : 4410095187688
Option 4 ID : 4410095187690

Q.7 In the given question, a statement divided into different segments is given. The first segment (A) is fixed, rearrange the other segments to form a coherent statement.

- (A) After the floodwaters receded, the relief teams prioritized
- (B) restoring clean water and sanitation to prevent outbreaks,
- (C) distributing emergency rations to isolated households,
- (D) and coordinating shelter for displaced families,
- (E) while assessing infrastructure damage for long-term rebuilding.

- Ans
- 1. ABCDE
 - 2. ADCBE
 - 3. ADECB
 - 4. AECBD

Question ID : 4410091518743
 Option 1 ID : 4410095998246
 Option 2 ID : 4410095998248
 Option 3 ID : 4410095998247
 Option 4 ID : 4410095998249

Q.8 Complete the following sentence by selecting the most appropriate option.

Do you mean Charlie Chaplin, _____ actor?

- Ans
- 1. that
 - 2. an
 - 3. a
 - 4. the

Question ID : 4410091338093
 Option 1 ID : 4410095284391
 Option 2 ID : 4410095284394
 Option 3 ID : 4410095284393
 Option 4 ID : 4410095284392

Q.9 Choose the correct option to complete the sentence.

When you look at _____ stars in _____ sky, do you ever wonder about life elsewhere?

- Ans
- 1. the, a
 - 2. an, the
 - 3. the, the
 - 4. a, a

Question ID : 4410091671518
 Option 1 ID : 4410096596769
 Option 2 ID : 4410096596770
 Option 3 ID : 4410096596771
 Option 4 ID : 4410096596768

Q.10 Choose the option that can be substituted for the expression: fear of food.

- Ans
- 1. Cynophobia
 - 2. Mysophobia
 - 3. Cibophobia
 - 4. Phonophobia

Question ID : 4410091526340
Option 1 ID : 4410096028479
Option 2 ID : 4410096028481
Option 3 ID : 4410096028478
Option 4 ID : 4410096028480

Q.11 Select the option that is the most appropriate antonym of the highlighted word in the given sentence.
They believed in an eternal friendship that would last forever.

- Ans
- 1. perpetual
 - 2. temporary
 - 3. immortal
 - 4. enduring

Question ID : 4410091603202
Option 1 ID : 4410096332006
Option 2 ID : 4410096332004
Option 3 ID : 4410096332005
Option 4 ID : 4410096332007

Q.12 Choose the correct option to complete the sentence.

The organisation ensures equal opportunities for all employees _____ their background or experience level.

- Ans
- 1. in spite of
 - 2. because of
 - 3. instead of
 - 4. regardless of

Question ID : 4410091523909
Option 1 ID : 4410096018910
Option 2 ID : 4410096018907
Option 3 ID : 4410096018908
Option 4 ID : 4410096018909

Q.13 Select the option that is the most appropriate antonym of the underlined word in the given sentence.

The town experienced a rapid proliferation of new businesses.

- Ans
- 1. depletion
 - 2. extension
 - 3. accession
 - 4. distension

Question ID : 4410091639650
Option 1 ID : 4410096476017
Option 2 ID : 4410096476016
Option 3 ID : 4410096476014
Option 4 ID : 4410096476015

Q.14 Replace the highlighted word segment with the appropriate one-word substitute.

With a home library containing over five thousand volumes, it was clear that the professor was an/a individual who has a great love for books.

- Ans
- 1. stoic
 - 2. horticulturist
 - 3. bibliophile
 - 4. pedestrian

Question ID : 4410091555250
Option 1 ID : 4410096143578
Option 2 ID : 4410096143576
Option 3 ID : 4410096143575
Option 4 ID : 4410096143577

Q.15 Choose the correct option to complete the sentence.

She studied diligently for weeks, _____ she still felt unprepared on the day of the exam.

- Ans
- 1. but
 - 2. yet
 - 3. so
 - 4. and

Question ID : 4410091524052
Option 1 ID : 4410096019484
Option 2 ID : 4410096019486
Option 3 ID : 4410096019485
Option 4 ID : 4410096019483

Comprehension:

Read the given passage and answer the questions that follow.

Water security has emerged as a critical global concern as growing populations, climate change and unsustainable consumption place increasing pressure on freshwater resources. Many regions now face recurring shortages due to over-extraction of groundwater, inefficient irrigation practices and pollution of rivers and lakes. These challenges threaten not only drinking water supplies but also food production, public health and economic stability. Sustainable resource management seeks to address these risks by balancing present needs with long-term availability. Strategies such as rainwater harvesting, watershed protection and the reuse of treated wastewater can significantly improve resilience. Equally important is improving governance. Effective water management requires transparent policies, coordination across sectors and the involvement of local communities, who often possess valuable knowledge about regional water systems. Technology also plays a growing role. Data-driven monitoring, efficient irrigation systems and early-warning tools for droughts and floods help optimise water use and reduce waste. However, technology alone cannot ensure water security. Without behavioural change and equitable access, improvements may benefit only a few. Ensuring water security therefore depends on integrating environmental sustainability, social equity and responsible management to safeguard this vital resource for future generations.

SubQuestion No : 16

Q.16 What is the main aim of sustainable resource management?

- Ans
- 1. Balancing present and future needs
 - 2. Increase in urban sanitation systems
 - 3. Over-extraction of groundwater
 - 4. Centralising water ownership and distribution

Question ID : 4410091587264
Option 1 ID : 4410096269941
Option 2 ID : 4410096269943
Option 3 ID : 4410096269940
Option 4 ID : 4410096269942

Comprehension:

Read the given passage and answer the questions that follow.

Water security has emerged as a critical global concern as growing populations, climate change and unsustainable consumption place increasing pressure on freshwater resources. Many regions now face recurring shortages due to over-extraction of groundwater, inefficient irrigation practices and pollution of rivers and lakes. These challenges threaten not only drinking water supplies but also food production, public health and economic stability. Sustainable resource management seeks to address these risks by balancing present needs with long-term availability. Strategies such as rainwater harvesting, watershed protection and the reuse of treated wastewater can significantly improve resilience. Equally important is improving governance. Effective water management requires transparent policies, coordination across sectors and the involvement of local communities, who often possess valuable knowledge about regional water systems. Technology also plays a growing role. Data-driven monitoring, efficient irrigation systems and early-warning tools for droughts and floods help optimise water use and reduce waste. However, technology alone cannot ensure water security. Without behavioural change and equitable access, improvements may benefit only a few. Ensuring water security therefore depends on integrating environmental sustainability, social equity and responsible management to safeguard this vital resource for future generations.

SubQuestion No : 17

Q.17 Which technological tool supports water management?

- Ans
- 1. Market forecasting tools
 - 2. Traditional irrigation channels
 - 3. Data-driven monitoring
 - 4. Seasonal migration patterns

Question ID : 4410091587266
Option 1 ID : 4410096269951
Option 2 ID : 4410096269948
Option 3 ID : 4410096269949
Option 4 ID : 4410096269950

Comprehension:

Read the given passage and answer the questions that follow.

Water security has emerged as a critical global concern as growing populations, climate change and unsustainable consumption place increasing pressure on freshwater resources. Many regions now face recurring shortages due to over-extraction of groundwater, inefficient irrigation practices and pollution of rivers and lakes. These challenges threaten not only drinking water supplies but also food production, public health and economic stability. Sustainable resource management seeks to address these risks by balancing present needs with long-term availability. Strategies such as rainwater harvesting, watershed protection and the reuse of treated wastewater can significantly improve resilience. Equally important is improving governance. Effective water management requires transparent policies, coordination across sectors and the involvement of local communities, who often possess valuable knowledge about regional water systems. Technology also plays a growing role. Data-driven monitoring, efficient irrigation systems and early-warning tools for droughts and floods help optimise water use and reduce waste. However, technology alone cannot ensure water security. Without behavioural change and equitable access, improvements may benefit only a few. Ensuring water security therefore depends on integrating environmental sustainability, social equity and responsible management to safeguard this vital resource for future generations.

SubQuestion No : 18

Q.18 What inference can be drawn about water access?

- Ans
- 1. It must be equitable.
 - 2. It requires privatisation.
 - 3. It improves automatically.
 - 4. It depends only on rainfall.

Question ID : 4410091587267
Option 1 ID : 4410096269953
Option 2 ID : 4410096269955
Option 3 ID : 4410096269954
Option 4 ID : 4410096269952

Comprehension:

Read the given passage and answer the questions that follow.

Water security has emerged as a critical global concern as growing populations, climate change and unsustainable consumption place increasing pressure on freshwater resources. Many regions now face recurring shortages due to over-extraction of groundwater, inefficient irrigation practices and pollution of rivers and lakes. These challenges threaten not only drinking water supplies but also food production, public health and economic stability. Sustainable resource management seeks to address these risks by balancing present needs with long-term availability. Strategies such as rainwater harvesting, watershed protection and the reuse of treated wastewater can significantly improve resilience. Equally important is improving governance. Effective water management requires transparent policies, coordination across sectors and the involvement of local communities, who often possess valuable knowledge about regional water systems. Technology also plays a growing role. Data-driven monitoring, efficient irrigation systems and early-warning tools for droughts and floods help optimise water use and reduce waste. However, technology alone cannot ensure water security. Without behavioural change and equitable access, improvements may benefit only a few. Ensuring water security therefore depends on integrating environmental sustainability, social equity and responsible management to safeguard this vital resource for future generations.

SubQuestion No : 19

Q.19 Identify the central theme of the passage:

- Ans
- 1. Sustainable management is essential for water security.
 - 2. Technology alone can solve water problems.
 - 3. Climate change affects only rainfall.
 - 4. Water scarcity is unavoidable because governance is ineffective.

Question ID : 4410091587268

Option 1 ID : 4410096269957

Option 2 ID : 4410096269958

Option 3 ID : 4410096269956

Option 4 ID : 4410096269959

Comprehension:

Read the given passage and answer the questions that follow.

Water security has emerged as a critical global concern as growing populations, climate change and unsustainable consumption place increasing pressure on freshwater resources. Many regions now face recurring shortages due to over-extraction of groundwater, inefficient irrigation practices and pollution of rivers and lakes. These challenges threaten not only drinking water supplies but also food production, public health and economic stability. Sustainable resource management seeks to address these risks by balancing present needs with long-term availability. Strategies such as rainwater harvesting, watershed protection and the reuse of treated wastewater can significantly improve resilience. Equally important is improving governance. Effective water management requires transparent policies, coordination across sectors and the involvement of local communities, who often possess valuable knowledge about regional water systems. Technology also plays a growing role. Data-driven monitoring, efficient irrigation systems and early-warning tools for droughts and floods help optimise water use and reduce waste. However, technology alone cannot ensure water security. Without behavioural change and equitable access, improvements may benefit only a few. Ensuring water security therefore depends on integrating environmental sustainability, social equity and responsible management to safeguard this vital resource for future generations.

SubQuestion No : 20

Q.20 Identify the tone of the passage:

- Ans
- 1. Narrative
 - 2. Emotional
 - 3. Sarcastic
 - 4. Analytical

Question ID : 4410091587269
Option 1 ID : 4410096269961
Option 2 ID : 4410096269963
Option 3 ID : 4410096269962
Option 4 ID : 4410096269960

Section : Hindi Language and Comprehension

Q.1 दिए गए वाक्य के रिक्त स्थान में मूल क्रिया-विशेषण शब्द का प्रयोग करें -
'रीमा आज कार्यालय से चली गयी।

- Ans
- 1. काफी
 - 2. ठीक
 - 3. हरेक
 - 4. अचानक

Question ID : 4410091528243
Option 1 ID : 4410096036166
Option 2 ID : 4410096036165
Option 3 ID : 4410096036164
Option 4 ID : 4410096036163

Q.2 दिये गये वाक्य के किस भाग में त्रुटि है?
साहित्यकार की लेखनी की परिक्षा पाठकों की संवेदनाओं को प्रभावित करने की क्षमता से होती है।

- Ans
- 1. प्रभावित करने की क्षमता से होती है।
 - 2. लेखनी की परिक्षा
 - 3. पाठकों की संवेदनाओं को
 - 4. साहित्यकार की

Question ID : 4410091547215
Option 1 ID : 4410096111734
Option 2 ID : 4410096111732
Option 3 ID : 4410096111733
Option 4 ID : 4410096111731

Q.3 निम्नलिखित वाक्य में रेखांकित शब्द के विलोम शब्द का चयन दिए गए विकल्पों में से कीजिए-
तिरस्कृत को गले लगाना महानता है।

- Ans
- 1. पुरस्कृत
 - 2. उत्प्रेरित
 - 3. निन्द्य
 - 4. विस्मृत

Question ID : 4410091618694
Option 1 ID : 4410096393649
Option 2 ID : 4410096393648
Option 3 ID : 4410096393647
Option 4 ID : 4410096393650

Q.4 'चिड़िया के ये बच्चे ----- हैं। उपयुक्त विशेषण चुनकर वाक्य पूर्ण करें।

- Ans
- 1. चुगते
 - 2. बैठे
 - 3. उड़ते
 - 4. नन्हें

Question ID : 4410091263154
Option 1 ID : 4410094985554
Option 2 ID : 4410094985552
Option 3 ID : 4410094985553
Option 4 ID : 4410094985551

Q.5 दिए गए वाक्य में उचित प्रेरणार्थक क्रिया शब्द का चयन करके रिक्त स्थान की पूर्ति करें -
अधिकारियों ने नगरपालिका से सड़कों की मरम्मत के लिए कर्मचारियों को सामग्री -----
--।

- Ans 1. दिलवाई
 2. बनवाई
 3. करवाई
 4. सुझाई

Question ID : 4410091547178
 Option 1 ID : 4410096111583
 Option 2 ID : 4410096111582
 Option 3 ID : 4410096111584
 Option 4 ID : 4410096111581

Q.6 नीचे एक वाक्य के खंडों को अव्यवस्थित क्रम में लिखा गया है। उस विकल्प का चयन करिए जो वाक्य का सही क्रम बताता हो-
 (a) और साहित्य के साथ
 (b) गहरा सम्बन्ध है
 (c) बहुत ही घनिष्ठ एवं
 (d) राष्ट्रीयता का भाषा

- Ans 1. c,b,a,d
 2. b,c,d,a
 3. a,d,c,b
 4. d,a,c,b

Question ID : 441009281083
 Option 1 ID : 4410091092262
 Option 2 ID : 4410091092261
 Option 3 ID : 4410091092259
 Option 4 ID : 4410091092260

Q.7 निम्न में से वाक्य में रेखांकित शब्द का विलोम शब्द कौन-सा है ?
 'तुलसीदास राम से अनुरक्त हैं।'

- Ans 1. विषाक्त
 2. अनुशासित
 3. अनुपालन
 4. विरक्त

Question ID : 4410091626551
 Option 1 ID : 4410096424578
 Option 2 ID : 4410096424576
 Option 3 ID : 4410096424577
 Option 4 ID : 4410096424579

Q.8 बड़ी मिनतों के बाद उसने अपना मौन तोड़ा।
वाक्य में प्रयुक्त मौन शब्द का पर्यायवाची क्या है?

- Ans
- 1. निस्तब्ध
 - 2. दीप्ति
 - 3. वसुंधरा
 - 4. पल्लव

Question ID : 4410091626448
Option 1 ID : 4410096424166
Option 2 ID : 4410096424164
Option 3 ID : 4410096424165
Option 4 ID : 4410096424167

Q.9 "जिसके हस्ताक्षर नीचे अंकित हैं" वाक्यांश के लिए निम्न में से कौनसा सार्थक शब्द है?

- Ans
- 1. अधोहस्ताक्षरकर्ता
 - 2. प्रस्तावक
 - 3. साक्षी
 - 4. लेखक

Question ID : 4410091285792
Option 1 ID : 4410095074803
Option 2 ID : 4410095074806
Option 3 ID : 4410095074805
Option 4 ID : 4410095074804

Q.10 दिये गये वाक्य के किस भाग में त्रुटि है?

कृषि विज्ञान प्रदर्शिनी में किसानों को नई तकनीक और उपकरणों के बारे में जानकारी दी गई।

- Ans
- 1. जानकारी दी गई।
 - 2. किसानों को
 - 3. कृषि विज्ञान प्रदर्शिनी में
 - 4. नई तकनीक और उपकरणों के बारे में

Question ID : 4410091547238
Option 1 ID : 441009611826
Option 2 ID : 441009611824
Option 3 ID : 441009611823
Option 4 ID : 441009611825

Q.11 निम्नलिखित वाक्य में रेखांकित शब्द के पर्यायवाची शब्द का चयन दिए गए विकल्पों में से कीजिए-
पानी बीच 'मीन' पियासी।

- Ans
- 1. शिखी
 - 2. विभावरी
 - 3. मत्स्य
 - 4. शायक

Question ID : 4410091618499
Option 1 ID : 4410096392867
Option 2 ID : 4410096392870
Option 3 ID : 4410096392869
Option 4 ID : 4410096392868

Q.12 उपयुक्त 'कारक' चिह्न का चयन कर रिक्त स्थान की पूर्ति कीजिए।
'रणधीर.....मार पड़ी है।'

- Ans
- 1. को
 - 2. ने
 - 3. का
 - 4. में

Question ID : 4410091524728
Option 1 ID : 4410096022119
Option 2 ID : 4410096022120
Option 3 ID : 4410096022121
Option 4 ID : 4410096022122

Q.13 निम्नलिखित वाक्य के रिक्त स्थान में उचित कारक चिह्न का प्रयोग करें -
'छत सामान रख दो।'

- Ans
- 1. ने
 - 2. से
 - 3. के लिए
 - 4. पर

Question ID : 4410091241823
Option 1 ID : 4410094900638
Option 2 ID : 4410094900637
Option 3 ID : 4410094900639
Option 4 ID : 4410094900636

Q.14 निम्नलिखित वाक्य में से वर्तनी त्रुटि की पहचान कर वाक्य को शुद्ध कीजिए।
'सास्त्रीजी, अपने सादगीपूर्ण जीवन और दृढ़ राष्ट्रभक्ति से देशवासियों के हृदय में अमिट स्थान बना चूके हैं।'

- Ans
- 1. सास्त्रीजी
 - 2. राष्ट्रभक्ति
 - 3. दृढ़
 - 4. सादगीपूर्ण

Question ID : 4410091629720
Option 1 ID : 4410096436966
Option 2 ID : 4410096436969
Option 3 ID : 4410096436968
Option 4 ID : 4410096436967

Q.15 निम्नलिखित विकल्पों में से रेखांकित शब्द का विलोम पहचानिए।
'शिक्षा ही वह माध्यम है जिसके द्वारा व्यक्ति अपने जीवन का नहीं बल्कि पूरे समाज का उत्थान कर सकता है।'

- Ans
- 1. साकार
 - 2. अनिष्ट
 - 3. गोचर
 - 4. पतन

Question ID : 4410091629899
Option 1 ID : 4410096437683
Option 2 ID : 4410096437682
Option 3 ID : 4410096437684
Option 4 ID : 4410096437681

Comprehension:

निम्नलिखित प्रश्नों के उत्तर गद्यांश के आधार पर दीजिए।

वर्धमान महावीर का जन्म ज्ञात्रि क्षत्रिय कुल में कुन्दग्राम नामक वैशाली के उपनगर में हुआ था। उनके पिता सिद्धार्थ एक धनधान्य-संपन्न मुखिया थे और उनकी माता त्रिशला वैशाली के लिच्छवि राजकुमार चेटक की बहन थीं। वर्धमान का विवाह उसकी चचेरी बहन यशोदा से हुआ था। यशोदा के गर्भ से उनकी एक पुत्री का जन्म हुआ था, जो उनके भतीजे जमाली से ब्याही गयी थी। महावीर ने तीस वर्ष की उम्र में अपना घर छोड़ दिया और वे केवल वर्षा ऋतु में विश्राम करते हुए एक संन्यासी के रूप में बारह साल तक भ्रमण करते रहे। तेरहवें साल में कठोर तपस्या और सतत साधना के उपरान्त उन्होंने ज्जिम्बिका ग्राम के निकट रिजुपालिका नदी के तट पर एक साल वृष के नीचे कैवल्य अथवा पूर्ण ज्ञान की प्राप्ति की। उन्होंने अपने जीवन के शेष बत्तीस साल जैन धर्म के प्रचार में और मगध तथा अंग में सन्यासियों को जैन संप्रदाय में संगठित करने में बिता दिये। लेकिन परवर्ती काल में जैन धर्म को गुजरात और राजस्थान में, उत्तर भारत के कुछ भागों में तथा मैसूर में अनुकूल वातावरण मिल गया।

SubQuestion No : 16

Q.16 गद्यांश के लिए उपयुक्त शीर्षक का चयन कीजिए।

- Ans
- 1. वर्धमान महावीर
 - 2. गौतम बुद्ध
 - 3. रैदास
 - 4. गुरुगोविंद सिंह

Question ID : 4410091626071
Option 1 ID : 4410096422694
Option 2 ID : 4410096422693
Option 3 ID : 4410096422696
Option 4 ID : 4410096422695

Comprehension:

निम्नलिखित प्रश्नों के उत्तर गद्यांश के आधार पर दीजिए।

वर्धमान महावीर का जन्म क्षत्रिय कुल में कुन्दग्राम नामक वैशाली के उपनगर में हुआ था। उनके पिता सिद्धार्थ एक धनधान्य-संपन्न मुखिया थे और उनकी माता त्रिशला वैशाली के लिच्छवि राजकुमार चेटक की बहन थीं। वर्धमान का विवाह उसकी चचेरी बहन यशोदा से हुआ था। यशोदा के गर्भ से उनकी एक पुत्री का जन्म हुआ था, जो उनके भतीजे जमाली से ब्याही गयी थी। महावीर ने तीस वर्ष की उम्र में अपना घर छोड़ दिया और वे केवल वर्षा ऋतु में विश्राम करते हुए एक संन्यासी के रूप में बारह साल तक भ्रमण करते रहे। तेरहवें साल में कठोर तपस्या और सतत साधना के उपरान्त उन्होंने ज़िम्बिका ग्राम के निकट रिजुपालिका नदी के तट पर एक साल वृष के नीचे कैवल्य अथवा पूर्ण ज्ञान की प्राप्ति की। उन्होंने अपने जीवन के शेष बत्तीस साल जैन धर्म के प्रचार में और मगध तथा अंग में सन्यासियों को जैन संप्रदाय में संगठित करने में बिता दिये। लेकिन परवर्ती काल में जैन धर्म को गुजरात और राजस्थान में, उत्तर भारत के कुछ भागों में तथा मैसूर में अनुकूल वातावरण मिल गया।

SubQuestion No : 17

Q.17 निम्न में से महावीर का जन्म किस कुल में हुआ था ?

- Ans
- 1. अवर्ण कुल
 - 2. ब्राहमण कुल
 - 3. वैश्य कुल
 - 4. क्षत्रिय कुल

Question ID : 4410091626073
Option 1 ID : 4410096422704
Option 2 ID : 4410096422701
Option 3 ID : 4410096422702
Option 4 ID : 4410096422703

Comprehension:

निम्नलिखित प्रश्नों के उत्तर गद्यांश के आधार पर दीजिए।

वर्धमान महावीर का जन्म ज्ञात्रि क्षत्रिय कुल में कुन्दग्राम नामक वैशाली के उपनगर में हुआ था। उनके पिता सिद्धार्थ एक धनधान्य-संपन्न मुखिया थे और उनकी माता त्रिशला वैशाली के लिच्छवि राजकुमार चेटक की बहन थीं। वर्धमान का विवाह उसकी चचेरी बहन यशोदा से हुआ था। यशोदा के गर्भ से उनकी एक पुत्री का जन्म हुआ था, जो उनके भतीजे जमाली से ब्याही गयी थी। महावीर ने तीस वर्ष की उम्र में अपना घर छोड़ दिया और वे केवल वर्षा ऋतु में विश्राम करते हुए एक संन्यासी के रूप में बारह साल तक भ्रमण करते रहे। तेरहवें साल में कठोर तपस्या और सतत साधना के उपरान्त उन्होंने ज़िम्बिका ग्राम के निकट रिजुपालिका नदी के तट पर एक साल वृष के नीचे कैवल्य अथवा पूर्ण ज्ञान की प्राप्ति की। उन्होंने अपने जीवन के शेष बत्तीस साल जैन धर्म के प्रचार में और मगध तथा अंग में सन्यासियों को जैन संप्रदाय में संगठित करने में बिता दिये। लेकिन परवर्ती काल में जैन धर्म को गुजरात और राजस्थान में, उत्तर भारत के कुछ भागों में तथा मैसूर में अनुकूल वातावरण मिल गया।

SubQuestion No : 18

Q.18 निम्न में से महावीर की माता त्रिशला किसकी बहन थीं?

- Ans
- 1. धनञ्जय की
 - 2. विष्णु गुप्त की
 - 3. चेटक की
 - 4. चेखव की

Question ID : 4410091626074
Option 1 ID : 4410096422708
Option 2 ID : 4410096422707
Option 3 ID : 4410096422705
Option 4 ID : 4410096422706

Comprehension:

निम्नलिखित प्रश्नों के उत्तर गद्यांश के आधार पर दीजिए।

वर्धमान महावीर का जन्म ज्ञात्रि क्षत्रिय कुल में कुन्दग्राम नामक वैशाली के उपनगर में हुआ था। उनके पिता सिद्धार्थ एक धनधान्य-संपन्न मुखिया थे और उनकी माता त्रिशला वैशाली के लिच्छवि राजकुमार चेटक की बहन थीं। वर्धमान का विवाह उसकी चचेरी बहन यशोदा से हुआ था। यशोदा के गर्भ से उनकी एक पुत्री का जन्म हुआ था, जो उनके भतीजे जमाली से ब्याही गयी थी। महावीर ने तीस वर्ष की उम्र में अपना घर छोड़ दिया और वे केवल वर्षा ऋतु में विश्राम करते हुए एक संन्यासी के रूप में बारह साल तक भ्रमण करते रहे। तेरहवें साल में कठोर तपस्या और सतत साधना के उपरान्त उन्होंने ज्जिम्बिका ग्राम के निकट रिजुपालिका नदी के तट पर एक साल वृष के नीचे कैवल्य अथवा पूर्ण ज्ञान की प्राप्ति की। उन्होंने अपने जीवन के शेष बत्तीस साल जैन धर्म के प्रचार में और मगध तथा अंग में सन्यासियों को जैन संप्रदाय में संगठित करने में बिता दिये। लेकिन परवर्ती काल में जैन धर्म को गुजरात और राजस्थान में, उत्तर भारत के कुछ भागों में तथा मैसूर में अनुकूल वातावरण मिल गया।

SubQuestion No : 19

Q.19 निम्न में से गद्यांश में प्रयुक्त 'भ्रमण' शब्द का अर्थ कौन-सा है ?

- Ans
- 1. घूमना
 - 2. घमंड
 - 3. घमाशान
 - 4. घनघोर

Question ID : 4410091626075
Option 1 ID : 4410096422709
Option 2 ID : 4410096422710
Option 3 ID : 4410096422712
Option 4 ID : 4410096422711

Comprehension:

निम्नलिखित प्रश्नों के उत्तर गद्यांश के आधार पर दीजिए।

वर्धमान महावीर का जन्म ज्ञात्रि क्षत्रिय कुल में कुन्दग्राम नामक वैशाली के उपनगर में हुआ था। उनके पिता सिद्धार्थ एक धनधान्य-संपन्न मुखिया थे और उनकी माता त्रिशला वैशाली के लिच्छवि राजकुमार चेटक की बहन थीं। वर्धमान का विवाह उसकी चचेरी बहन यशोदा से हुआ था। यशोदा के गर्भ से उनकी एक पुत्री का जन्म हुआ था, जो उनके भतीजे जमाली से ब्याही गयी थी। महावीर ने तीस वर्ष की उम्र में अपना घर छोड़ दिया और वे केवल वर्षा ऋतु में विश्राम करते हुए एक संन्यासी के रूप में बारह साल तक भ्रमण करते रहे। तेरहवें साल में कठोर तपस्या और सतत साधना के उपरान्त उन्होंने ज़िम्बिका ग्राम के निकट रिजुपालिका नदी के तट पर एक साल वृष्ट के नीचे कैवल्य अथवा पूर्ण ज्ञान की प्राप्ति की। उन्होंने अपने जीवन के शेष बत्तीस साल जैन धर्म के प्रचार में और मगध तथा अंग में सन्यासियों को जैन संप्रदाय में संगठित करने में बिता दिये। लेकिन परवर्ती काल में जैन धर्म को गुजरात और राजस्थान में, उत्तर भारत के कुछ भागों में तथा मैसूर में अनुकूल वातावरण मिल गया।

SubQuestion No : 20

Q.20 निम्न में से गद्यांश में प्रयुक्त शब्द 'कठोर' का विलोम शब्द कौन-सा होगा ?

- Ans
- 1. दौयम
 - 2. कोमल
 - 3. कमल
 - 4. सरल

Question ID : 4410091626077
Option 1 ID : 4410096422718
Option 2 ID : 4410096422719
Option 3 ID : 4410096422720
Option 4 ID : 4410096422717

Section : Discipline1

Q.1 What principle should vocational curriculum follow to avoid gender stereotypes?

- Ans
- 1. Caste purity standards
 - 2. Freedom from gender roles
 - 3. Domestic roles for stability
 - 4. Class-based skill use

Question ID : 4410091557156
Option 1 ID : 4410096151188
Option 2 ID : 4410096151187
Option 3 ID : 4410096151185
Option 4 ID : 4410096151186

Q.2 In the context of contemporary Indian society, how does the hierarchical caste system typically influence social mobility for individuals from marginalized backgrounds?

- Ans
- 1. It creates equal opportunities for all individuals
 - 2. It often limits opportunities for upward mobility
 - 3. It encourages cross-caste marriages widely
 - 4. It makes professional achievement the only criterion

Question ID : 4410091678814
Option 1 ID : 4410096623466
Option 2 ID : 4410096623465
Option 3 ID : 4410096623467
Option 4 ID : 4410096623468

Q.3 At what stage do children begin to show concern for a crying friend and start understanding concepts like "mine" and "yours"?

- Ans
- 1. 5 years old
 - 2. 12 months old
 - 3. 3 years old
 - 4. 6 months old

Question ID : 4410091539827
Option 1 ID : 4410096082666
Option 2 ID : 4410096082664
Option 3 ID : 4410096082665
Option 4 ID : 4410096082663

Q.4 A teenager posits that in the event of human colonisation of Mars, a new legislation would be required to safeguard its environment. This statement most accurately reflects which cognitive ability?

- Ans
- 1. Abstract and hypothetical reasoning
 - 2. Preoperational symbolic function
 - 3. Egocentric speech
 - 4. Object permanence

Question ID : 4410091541914
Option 1 ID : 4410096090820
Option 2 ID : 4410096090822
Option 3 ID : 4410096090819
Option 4 ID : 4410096090821

Q.5 A teenager begins to mimic the language and dress style of a famous celebrity seen frequently on television. This behavior is most closely associated with which means of socialization?

- Ans
- 1. Peer acceptance
 - 2. Religious teaching
 - 3. Formal education
 - 4. Imitation via media

Question ID : 4410091628949
Option 1 ID : 4410096433944
Option 2 ID : 4410096433945
Option 3 ID : 4410096433942
Option 4 ID : 4410096433943

Q.6 A school analyses learner needs, sets objectives, designs aligned learning activities, and evaluates outcomes. Which curriculum approach is this?

- Ans
- 1. Content-centered approach focusing on material
 - 2. Behavioural approach with pre-set goals and objectives
 - 3. Learner-centered approach prioritizing interests
 - 4. Managerial approach led by school manager

Question ID : 4410091630307
Option 1 ID : 4410096439380
Option 2 ID : 4410096439378
Option 3 ID : 4410096439381
Option 4 ID : 4410096439379

Q.7 Peace education primarily seeks to promote:

- Ans
- 1. Teach students to compete aggressively
 - 2. Encourage social divisions
 - 3. Promote understanding and conflict resolution
 - 4. Focus only on military training

Question ID : 4410091547359
Option 1 ID : 4410096112303
Option 2 ID : 4410096112306
Option 3 ID : 4410096112304
Option 4 ID : 4410096112305

Q.8 Which factor involves the impact of shared beliefs, customs, and traditions on personality?

- Ans
- 1. Cultural factors
 - 2. Social factors
 - 3. Genetic factors
 - 4. Economic factors

Question ID : 4410091540053

Option 1 ID : 4410096083572

Option 2 ID : 4410096083571

Option 3 ID : 4410096083574

Option 4 ID : 4410096083573

Q.9 What quality does peace and international understanding strengthen for democratic citizenship?

- Ans
- 1. Focusing on material riches
 - 2. Standardizing global culture
 - 3. Strengthening respect for human rights
 - 4. Enhancing national competition

Question ID : 4410091557229

Option 1 ID : 4410096151446

Option 2 ID : 4410096151448

Option 3 ID : 4410096151447

Option 4 ID : 4410096151445

Q.10 What does national integration aim to inspire among individuals?

- Ans
- 1. Encouraging sectarian interests
 - 2. Promoting one's regional identity
 - 3. Placing loyalty to the country above group loyalties
 - 4. Focusing solely on individual welfare

Question ID : 4410091652125

Option 1 ID : 4410096524365

Option 2 ID : 4410096524363

Option 3 ID : 4410096524364

Option 4 ID : 4410096524366

Q.11 University Education Commission suggested that school education should:

- Ans 1. Serve both students going to university and those entering work
 2. Separate students strictly into academic and vocational tracks
 3. Avoid vocational components to make strong in theory subjects
 4. Prepare only those who wish to enter university

Question ID : 4410091570587
Option 1 ID : 4410096203321
Option 2 ID : 4410096203320
Option 3 ID : 4410096203322
Option 4 ID : 4410096203319

Q.12 Which of the following options best describes the concept of personality?

- Ans 1. Only emotional traits of a person
 2. The physical appearance of an individual
 3. Unique behavioural patterns
 4. Temporary mood changes

Question ID : 4410091525168
Option 1 ID : 4410096023864
Option 2 ID : 4410096023862
Option 3 ID : 4410096023863
Option 4 ID : 4410096023865

Q.13 Prioritizing Proximodistal development, which task sequence is best?

- Ans 1. Drawing circles, then painting
 2. Sitting up, then neck control
 3. Crawling, then standing
 4. Throwing large ball, then writing

Question ID : 4410091549483
Option 1 ID : 4410096120661
Option 2 ID : 4410096120663
Option 3 ID : 4410096120664
Option 4 ID : 4410096120662

Q.14 What is the required representation of parents in the School Management Committee as per the RTE Act?

- Ans 1. 75% representation from parent members.
 2. 25% representation from parent members.
 3. 100% representation from parent members.
 4. 50% representation from parent members.

Question ID : 4410091639746
Option 1 ID : 4410096476214
Option 2 ID : 4410096476215
Option 3 ID : 4410096476217
Option 4 ID : 4410096476216

Q.15 Which factor is NOT responsible for the continued existence of the caste system in Indian society?

- Ans 1. Family upbringing enforcing endogamy and traditions
 2. Equal opportunities for economic success across castes
 3. Economic networks providing jobs within caste groups
 4. Religious beliefs in karma and purity-pollution concepts

Question ID : 4410091639601
Option 1 ID : 4410096475907
Option 2 ID : 4410096475909
Option 3 ID : 4410096475908
Option 4 ID : 4410096475906

Q.16 Which of the following best describes the nature of Indian society?

- Ans 1. Uniform and monolithic
 2. Homogeneous and isolated
 3. Diverse and pluralistic
 4. Single-culture and multi-class

Question ID : 4410091616599
Option 1 ID : 4410096385306
Option 2 ID : 4410096385309
Option 3 ID : 4410096385307
Option 4 ID : 4410096385308

Q.17 A child refrains from cheating on a test primarily because they fear being caught and punished by the teacher. Which characteristic of moral development does this behavior best illustrate?

- Ans
- 1. Following conscience in the post-conventional stage
 - 2. Desire to gain approval in the conventional stage
 - 3. Obedience to avoid punishment in the pre-conventional stage
 - 4. Respect for rules in the conventional stage

Question ID : 4410091678808
Option 1 ID : 4410096623444
Option 2 ID : 4410096623442
Option 3 ID : 4410096623441
Option 4 ID : 4410096623443

Q.18 Schemas in Piaget's theory are:

- Ans
- 1. Organized ways understanding experience
 - 2. External objects shaping behaviour
 - 3. Temporary rules used randomly
 - 4. Inborn actions without changes

Question ID : 4410091570542
Option 1 ID : 4410096203140
Option 2 ID : 4410096203143
Option 3 ID : 4410096203141
Option 4 ID : 4410096203142

Q.19 Which of the following best reflects the responsibility of local authorities under RTE-2009 regarding admission of out-of-school children?

- Ans
- 1. Delegating responsibilities solely to state governments
 - 2. Charging admission fees for all applicants within their jurisdiction
 - 3. Restricting admissions to children with prior schooling
 - 4. Identifying and enrolling all children within their jurisdiction

Question ID : 4410091678827
Option 1 ID : 4410096623520
Option 2 ID : 4410096623519
Option 3 ID : 4410096623517
Option 4 ID : 4410096623518

Q.20 Personality is best described as:

- Ans
- 1. Moral and ethical judgements about behaviour
 - 2. Inborn patterns of temperament alone
 - 3. Temporary emotional states within an individual
 - 4. Relatively stable traits guiding behaviour

Question ID : 4410091630203
Option 1 ID : 4410096438941
Option 2 ID : 4410096438939
Option 3 ID : 4410096438938
Option 4 ID : 4410096438940

Section : Discipline2

Q.1 A teacher aims to foster critical thinking and language skills in an early literacy classroom. Which classroom practice best utilizes literature to achieve both these goals simultaneously?

- Ans
- 1. Having students copy sentences from storybooks
 - 2. Facilitating group discussions on characters' decisions in stories
 - 3. Repeating rhymes aloud as a class
 - 4. Drawing illustrations for favorite story scenes

Question ID : 4410091623592
Option 1 ID : 4410096412952
Option 2 ID : 4410096412953
Option 3 ID : 4410096412954
Option 4 ID : 4410096412955

Q.2 Which of the following best describes experiential learning?

- Ans
- 1. Learning only from textbooks
 - 2. Learning by listening to lectures
 - 3. Learning by rote memorization
 - 4. Learning through direct experience and reflection

Question ID : 4410091650784
Option 1 ID : 4410096519252
Option 2 ID : 4410096519253
Option 3 ID : 4410096519251
Option 4 ID : 4410096519250

Q.3 A group member who consistently encourages quieter members to participate demonstrates which positive group pattern?

- Ans
- 1. Inclusiveness
 - 2. Confrontation
 - 3. Withdrawal
 - 4. Competition

Question ID : 4410091692403
Option 1 ID : 4410096675704
Option 2 ID : 4410096675705
Option 3 ID : 4410096675706
Option 4 ID : 4410096675707

Q.4 Which of the following activities can be done in teaching fiction in the class?

(1) Visualization (2) Suggestion (3) Rewrite (4) Prediction

- Ans
- 1. (1), (2), (3) and (4)
 - 2. Only (2)
 - 3. Only (3)
 - 4. Only (1)

Question ID : 4410091546754
Option 1 ID : 4410096109889
Option 2 ID : 4410096109890
Option 3 ID : 4410096109888
Option 4 ID : 4410096109887

Q.5 The monitorial system is an early form of peer tutoring where:

- Ans
- 1. Bright students teach lessons to other students
 - 2. Parents supervise classroom activities
 - 3. Teachers teach only one class at a time
 - 4. Teachers teach only small classes

Question ID : 4410091602348
Option 1 ID : 4410096328968
Option 2 ID : 4410096328969
Option 3 ID : 4410096328966
Option 4 ID : 4410096328967

Q.6 Why is it important to use multiple sources when assessing early literacy development in children?

- Ans
- 1. It eliminates the need for teacher input
 - 2. It captures diverse skills and reduces bias
 - 3. It ensures that only the highest scores are recorded
 - 4. It makes assessment faster and easier

Question ID : 4410091608568
Option 1 ID : 4410096353187
Option 2 ID : 4410096353186
Option 3 ID : 4410096353185
Option 4 ID : 4410096353184

Q.7 How does the maxim 'Whole to Part' suggest presenting educational material?

- Ans
- 1. Focus on partitioning complex knowledge
 - 2. Begin with specific statements
 - 3. Start with the complete scenario
 - 4. Prioritize direct experiences

Question ID : 4410091653636
Option 1 ID : 4410096529891
Option 2 ID : 4410096529893
Option 3 ID : 4410096529890
Option 4 ID : 4410096529892

Q.8 Observation is often undervalued because:

- Ans
- 1. Modern education emphasises reading and writing over perceptual skills
 - 2. Teachers receive special incentives only for teaching observation
 - 3. Observation is considered too difficult for students to learn in classrooms
 - 4. Most professions do not require developed observational abilities

Question ID : 4410091572367
Option 1 ID : 4410096210456
Option 2 ID : 4410096210459
Option 3 ID : 4410096210457
Option 4 ID : 4410096210458

Q.9 A teacher wants to foster a love for reading and improve language skills in her classroom. Which classroom practice aligns best with the role of literature in language learning?

- Ans
- 1. Focusing exclusively on grammar exercises and sentence correction drills.
 - 2. Encouraging students to read stories and discuss characters, themes, and ideas aloud.
 - 3. Using only textbooks for reading comprehension without creative or imaginative texts.
 - 4. Assigning students to memorize long lists of vocabulary words without context.

Question ID : 4410091638098
Option 1 ID : 4410096469990
Option 2 ID : 4410096469988
Option 3 ID : 4410096469991
Option 4 ID : 4410096469989

Q.10 Which key characteristic is shared by all cultural icons according to the stricter parameters of iconicity?

- Ans
- 1. They must be unique to individuals.
 - 2. They rely exclusively on aural symbolism.
 - 3. They are always images.
 - 4. They are always associated with historical events.

Question ID : 4410091653546
Option 1 ID : 4410096529523
Option 2 ID : 4410096529524
Option 3 ID : 4410096529522
Option 4 ID : 4410096529525

Q.11 Understanding how family, school, and media influence behaviour best illustrates sociology's study of:

- Ans
- 1. Social norms
 - 2. Social values
 - 3. Social institutions
 - 4. Social relationships

Question ID : 4410091633085
Option 1 ID : 4410096450461
Option 2 ID : 4410096450459
Option 3 ID : 4410096450460
Option 4 ID : 4410096450458

Q.12 In a classroom where students participate in role-play based on a story's characters, which literacy skills are primarily being developed through this activity?

- Ans
- 1. Physical coordination and athletic skills are improved.
 - 2. Scientific observation and classification abilities are enhanced.
 - 3. Numerical reasoning and calculation skills are practiced.
 - 4. Speaking, listening, and empathy skills are strengthened.

Question ID : 4410091683532
Option 1 ID : 4410096641057
Option 2 ID : 4410096641056
Option 3 ID : 4410096641055
Option 4 ID : 4410096641054

Q.13 A teacher wants to introduce a mindfulness approach to help students manage exam-related stress. She begins each class with a brief activity where students close their eyes, focus on their breath, and silently notice any bodily sensations without reacting. Which mindfulness component is most directly being engaged in this scenario?

- Ans
- 1. Striving is being engaged as students focus on their breath and bodily sensations.
 - 2. Judgment is being engaged as students focus on their breath and bodily sensations.
 - 3. Intention is being engaged as students focus on their breath and bodily sensations.
 - 4. Attention is being engaged as students focus on their breath and bodily sensations.

Question ID : 4410091613225
Option 1 ID : 4410096371736
Option 2 ID : 4410096371735
Option 3 ID : 4410096371734
Option 4 ID : 4410096371737

Q.14 How does journal writing foster critical thinking in the process of self-understanding?

- Ans
- 1. By copying journal entries from peers.
 - 2. By focusing only on future goals without reflection.
 - 3. By encouraging analysis of one's beliefs and decisions.
 - 4. By describing daily events without questioning them.

Question ID : 4410091619212
Option 1 ID : 4410096395718
Option 2 ID : 4410096395719
Option 3 ID : 4410096395717
Option 4 ID : 4410096395716

Q.15 Why should a lesson plan include specific activities for both introduction and conclusion of a lesson?

- Ans
- 1. To reduce teacher's burden and talk time
 - 2. To maximize homework assignments
 - 3. To manage student attendance on priority basis
 - 4. To frame learning and reinforce key concepts

Question ID : 4410091678974
Option 1 ID : 4410096624107
Option 2 ID : 4410096624105
Option 3 ID : 4410096624108
Option 4 ID : 4410096624106

Q.16 Young children acquire their first language primarily through continuous exposure, meaningful interaction, and participation in everyday home communication. This process is termed:

- Ans
- 1. Structured grammar instruction
 - 2. Natural language acquisition
 - 3. Controlled vocabulary training
 - 4. Formal language learning

Question ID : 4410091546893
Option 1 ID : 4410096110442
Option 2 ID : 4410096110441
Option 3 ID : 4410096110443
Option 4 ID : 4410096110440

Q.17 Which term best describes being conscious of thoughts and feelings during class activities?

- Ans
- 1. Competition
 - 2. Discipline
 - 3. Repetition
 - 4. Self-awareness

Question ID : 4410091629032
Option 1 ID : 4410096434272
Option 2 ID : 4410096434270
Option 3 ID : 4410096434273
Option 4 ID : 4410096434271

Q.18 What does Piaget's concept of 'conservation' refer to?

- Ans
- 1. Linking numbers to objects
 - 2. Performing complex calculations
 - 3. Ability to count objects correctly
 - 4. Understanding that quantity remains the same despite changes in shape or appearance

Question ID : 4410091612183
Option 1 ID : 4410096367577
Option 2 ID : 4410096367578
Option 3 ID : 4410096367576
Option 4 ID : 4410096367575

Q.19 According to Auguste Comte, what does the term 'sociology' primarily refer to?

- Ans
- 1. Application of economic method in studying society and individual
 - 2. Application of scientific method in studying society and individual
 - 3. Application of political method in studying society and individual
 - 4. Application of artistic method in studying society and individual

Question ID : 4410091639951
Option 1 ID : 4410096477012
Option 2 ID : 4410096477010
Option 3 ID : 4410096477013
Option 4 ID : 4410096477011

Q.20 उस विकल्प की पहचान कीजिए जो कक्षा अनुदेश में सिद्धांतों के सूक्ष्म (nuanced) अनुप्रयोग को सबसे यथार्थ रूप से दर्शाता है।

- Ans
- 1. विषयों को अप्रत्याशित रूप से प्रस्तुत करने से शिक्षार्थियों की स्वतंत्र तर्क क्षमता मजबूत होती है।
 - 2. अनुदेश के दौरान पाठों के बीच संबंधों को कम करने से ध्यान केंद्रित करने में बढ़ावा मिलता है।
 - 3. अनुक्रमण विचार यह सुनिश्चित करते हैं कि शिक्षार्थी अवधारणाओं को वैचारिक निरंतरता के साथ समेकित करते हैं।
 - 4. विषयवस्तु को एकसमान रूप से प्रस्तुत करने से शिक्षार्थी बिना किसी संरचित निर्देशन के अनुकूलन कर सकते हैं।

Question ID : 4410091542414
Option 1 ID : 4410096092760
Option 2 ID : 4410096092759
Option 3 ID : 4410096092762
Option 4 ID : 4410096092761

Q.1 Why is the practice of ending cheating during examinations and stopping teachers from taking tuitions considered a milestone?

- Ans
- 1. It aims to improve teaching skills and educational quality
 - 2. It reduces the need for additional teacher training or instructional support
 - 3. It decreases the number of students
 - 4. It allows schools to restructure schedules and classroom time more flexibly

Question ID : 4410091608354
Option 1 ID : 4410096352332
Option 2 ID : 4410096352333
Option 3 ID : 4410096352334
Option 4 ID : 4410096352335

Q.2 In an Indian English classroom, students are encouraged to code-switch between Hindi and English when explaining grammar patterns. This practice best exemplifies which strategy from the context?

- Ans
- 1. Multilingual scaffolding to support meaning-making
 - 2. Focusing exclusively on formal written English
 - 3. Drill-based memorization for error-free performance
 - 4. Strict correction to eliminate Indianisms

Question ID : 4410091613401
Option 1 ID : 4410096372440
Option 2 ID : 4410096372441
Option 3 ID : 4410096372439
Option 4 ID : 4410096372438

Q.3 Which of the following is the main personal quality required for an effective facilitator in problem-based learning?

- Ans
- 1. Experience in textbook writing
 - 2. Advanced computer skills
 - 3. Strict adherence to traditional methods
 - 4. Content knowledge and competence

Question ID : 4410091604511
Option 1 ID : 4410096337219
Option 2 ID : 4410096337218
Option 3 ID : 4410096337217
Option 4 ID : 4410096337216

Q.4 Which play type best encourages social negotiation and conflict resolution skills among peers?

- Ans
- 1. Parallel play
 - 2. Associative play
 - 3. Cooperative play
 - 4. Solitary play

Question ID : 4410091635491
Option 1 ID : 4410096459984
Option 2 ID : 4410096459985
Option 3 ID : 4410096459986
Option 4 ID : 4410096459983

Q.5 According to Piaget, at which developmental stage does children understand numbers through concrete objects?

- Ans
- 1. Preoperational stage
 - 2. Sensorimotor stage
 - 3. Formal operational stage
 - 4. Concrete operations stage

Question ID : 4410091546875
Option 1 ID : 4410096110368
Option 2 ID : 4410096110370
Option 3 ID : 4410096110371
Option 4 ID : 4410096110369

Q.6 Which statement best describes parallel play in children's development?

- Ans
- 1. Children interact socially but without organized structure or goals.
 - 2. Children play independently without any contact with other children.
 - 3. Children play alongside each other using similar toys but without interaction.
 - 4. Children work together toward a common goal with shared materials.

Question ID : 4410091638852
Option 1 ID : 4410096472987
Option 2 ID : 4410096472986
Option 3 ID : 4410096472984
Option 4 ID : 4410096472985

Q.7 How do alternative schools fundamentally differ from traditional schools based on their core beliefs?

- Ans
- 1. They do not allow flexible programs for learners from diverse context.
 - 2. They require all students to study at the same rate with same syllabus.
 - 3. They believe all students are of value and need to find positive qualities.
 - 4. They focus on academic excellence of children as a core objective.

Question ID : 4410091609093

Option 1 ID : 4410096355291

Option 2 ID : 4410096355290

Option 3 ID : 4410096355289

Option 4 ID : 4410096355288

Q.8 A teacher observes that some students feel anxious during math lessons and are reluctant to participate. She introduces math games and collaborative activities to make lessons more enjoyable. Which objective is the teacher primarily targeting?

- Ans
- 1. Strengthening measurement skills
 - 2. Enhancing computational accuracy
 - 3. Promoting advanced algebraic concepts
 - 4. Development of interest and positive attitude

Question ID : 4410091683587

Option 1 ID : 4410096641276

Option 2 ID : 4410096641274

Option 3 ID : 4410096641277

Option 4 ID : 4410096641275

Q.9 A student tries several methods to solve a difficult mathematics problem. After making repeated mistakes, he finally finds the correct solution and uses the same method in similar problems later. This learning best illustrates:

- Ans
- 1. Trial-and-error learning
 - 2. Insight learning
 - 3. Observational learning
 - 4. Rote memorization

Question ID : 4410091606610

Option 1 ID : 4410096345438

Option 2 ID : 4410096345436

Option 3 ID : 4410096345437

Option 4 ID : 4410096345439

Q.10 Which sentence correctly uses subject-verb agreement?

- Ans 1. The dogs run in the park every morning.
 2. The dog are running in the park every morning.
 3. The dogs runs in the park every morning.
 4. The dog run in the park every morning.

Question ID : 4410091604147
Option 1 ID : 4410096335766
Option 2 ID : 4410096335769
Option 3 ID : 4410096335767
Option 4 ID : 4410096335768

Q.11 Which of the following is a significant factor that shapes gendered roles in Indian society?

- Ans 1. Natural differences
 2. School uniforms
 3. Media images
 4. Family expectations and traditions

Question ID : 4410091606789
Option 1 ID : 4410096346143
Option 2 ID : 4410096346140
Option 3 ID : 4410096346141
Option 4 ID : 4410096346142

Q.12 In which of the following teaching methods does a student find out everything for himself through complete self-activity or self-learning?

- Ans 1. Deductive method
 2. Lecture method
 3. Inductive method
 4. Heuristic method

Question ID : 4410091546827
Option 1 ID : 4410096110179
Option 2 ID : 4410096110176
Option 3 ID : 4410096110178
Option 4 ID : 4410096110177

Q.13 Which psychological attitude is most important for a good facilitator to create a supportive classroom environment?

- Ans
- 1. Competitiveness
 - 2. Empathy
 - 3. Strictness
 - 4. Patience

Question ID : 4410091610649
Option 1 ID : 4410096361477
Option 2 ID : 4410096361475
Option 3 ID : 4410096361476
Option 4 ID : 4410096361478

Q.14 A teacher pairs the sound of a bell with lunchtime in a classroom. Over time, students begin to feel hungry when the bell rings, even without seeing lunch. This is an example of which learning process, and what is the role of the bell?

- Ans
- 1. Classical conditioning; the bell is the unconditioned stimulus
 - 2. Trial and error learning; the bell is a reinforcement
 - 3. Trial and error learning; the bell is the unconditioned stimulus
 - 4. Classical conditioning; the bell is the conditioned stimulus

Question ID : 4410091609842
Option 1 ID : 4410096358281
Option 2 ID : 4410096358282
Option 3 ID : 4410096358283
Option 4 ID : 4410096358280

Q.15 During a planning session, a school founder proposes rotating leadership roles among staff and making decisions through group consensus. How does this administrative structure align with the alternatives in education described in the context?

- Ans
- 1. It emphasizes teacher-centric control over student choices
 - 2. It fosters collective ownership and avoids rigid hierarchies
 - 3. It prioritizes administrative efficiency over collaboration
 - 4. It ensures faster decision-making through top-down authority

Question ID : 4410091616429
Option 1 ID : 4410096384640
Option 2 ID : 4410096384639
Option 3 ID : 4410096384641
Option 4 ID : 4410096384638

Q.16 Which aspect helps educators develop a vision for education?

- Ans
- 1. Knowledge
 - 2. Skills
 - 3. Appearance
 - 4. Values

Question ID : 4410091630215
Option 1 ID : 4410096438996
Option 2 ID : 4410096438994
Option 3 ID : 4410096438997
Option 4 ID : 4410096438995

Q.17 Listening and reading vocabulary mainly contribute to the development of:

- Ans
- 1. Spoken vocabulary
 - 2. Passive vocabulary
 - 3. Active vocabulary
 - 4. Written vocabulary

Question ID : 4410091638905
Option 1 ID : 4410096473196
Option 2 ID : 4410096473198
Option 3 ID : 4410096473197
Option 4 ID : 4410096473199

Q.18 The linguistic attitude that strictly demands consistent spelling, adherence to predetermined rules, and precise usage is labeled as:

- Ans
- 1. Contextual
 - 2. Prescriptive
 - 3. Functional
 - 4. Interpretive

Question ID : 4410091550593
Option 1 ID : 4410096124834
Option 2 ID : 4410096124832
Option 3 ID : 4410096124833
Option 4 ID : 4410096124831

Q.19 Which example best illustrates how family socialization can shape gendered roles in Indian households?

- Ans
- 1. Parents enrolling all children in mixed-gender sports and coding clubs
 - 2. A family discussing gender stereotypes and challenging them together
 - 3. Assigning boys more outdoor chores while girls do caregiving tasks at home
 - 4. Parents encouraging all children to rotate chores and make joint decisions

Question ID : 4410091563645

Option 1 ID : 4410096176146

Option 2 ID : 4410096176145

Option 3 ID : 4410096176147

Option 4 ID : 4410096176148

Q.20 What does school culture primarily influence?

- Ans
- 1. Infrastructure
 - 2. Curriculum
 - 3. Behaviour
 - 4. Attendance

Question ID : 4410091635970

Option 1 ID : 4410096461858

Option 2 ID : 4410096461856

Option 3 ID : 4410096461855

Option 4 ID : 4410096461857

Section : Discipline4

Q.1 Which concept is central to environmental studies?

- Ans
- 1. Geometry
 - 2. Sustainability
 - 3. Botany
 - 4. Meteorology

Question ID : 4410091631485

Option 1 ID : 4410096444159

Option 2 ID : 4410096444156

Option 3 ID : 4410096444158

Option 4 ID : 4410096444157

Q.2 How does multimedia technology impact class efficiency in English teaching?

- Ans
- 1. It restricts the flow of information and makes class monotonous.
 - 2. It enriches teaching content and makes the best use of class time.
 - 3. It focuses only on teacher instruction and reduces interactivity.
 - 4. It reduces opportunities for student participation in learning.

Question ID : 4410091624757
Option 1 ID : 4410096417570
Option 2 ID : 4410096417568
Option 3 ID : 4410096417569
Option 4 ID : 4410096417567

Q.3 Which feature makes a textbook pedagogically effective?

- Ans
- 1. Dense factual content presented in continuous narrative form
 - 2. Exclusive focus on summative assessment questions
 - 3. Inclusion of activities, questions, and multiple perspectives
 - 4. Emphasis on authoritative explanations without learner engagement

Question ID : 4410091602708
Option 1 ID : 4410096330405
Option 2 ID : 4410096330407
Option 3 ID : 4410096330404
Option 4 ID : 4410096330406

Q.4 Which material is classified as a teaching-learning material (TLM)?

- Ans
- 1. Register
 - 2. Bell
 - 3. Pointer
 - 4. Textbook

Question ID : 4410091636461
Option 1 ID : 4410096463739
Option 2 ID : 4410096463740
Option 3 ID : 4410096463738
Option 4 ID : 4410096463737

Q.5 Which skill is most restricted by the Grammar Translation Method (GTM)?

- Ans
- 1. Vocabulary development
 - 2. Grammar analysis
 - 3. Speaking and listening
 - 4. Reading and writing

Question ID : 4410091602555
Option 1 ID : 4410096329795
Option 2 ID : 4410096329794
Option 3 ID : 4410096329792
Option 4 ID : 4410096329793

Q.6 During lesson planning, a teacher checks the textbook for accuracy of facts and appropriateness of illustrations. What does this activity represent?

- Ans
- 1. Deliberate memorisation of subject facts
 - 2. Effective organisation of classroom activities
 - 3. Systematic analysis of textbook content
 - 4. Continuous evaluation of student learning

Question ID : 4410091690732
Option 1 ID : 4410096669107
Option 2 ID : 4410096669106
Option 3 ID : 4410096669104
Option 4 ID : 4410096669105

Q.7 Which characteristic is central to the Grammar Translation Method of teaching English?

- Ans
- 1. Integrating digital tools as the primary medium
 - 2. Emphasizing grammar–translation practice
 - 3. Focusing only on spoken fluency
 - 4. Encouraging experiential, task-based learning

Question ID : 4410091641204
Option 1 ID : 4410096481972
Option 2 ID : 4410096481969
Option 3 ID : 4410096481970
Option 4 ID : 4410096481971

Q.8 A school leader wants to ensure equitable resource distribution among classrooms. What is the most effective administrative leadership practice in this scenario?

- Ans
- 1. Distributing supplies equally as per-teacher quotas
 - 2. Providing resources only to high-performing classes
 - 3. Delegating all resource decisions to department heads
 - 4. Implementing a transparent resource allocation policy

Question ID : 4410091642801
Option 1 ID : 4410096488098
Option 2 ID : 4410096488100
Option 3 ID : 4410096488099
Option 4 ID : 4410096488097

Q.9 A teacher organizes an activity where students compare types of housing materials (Science/Physics) used in local villages with the socio-economic status of the residents (Social Science). This instructional design primarily applies the approach of:

- Ans
- 1. Disciplinary content segmentation
 - 2. Process skills specialization
 - 3. Integrated content analysis
 - 4. Abstract concept simplification

Question ID : 4410091550882
Option 1 ID : 4410096125805
Option 2 ID : 4410096125803
Option 3 ID : 4410096125806
Option 4 ID : 4410096125804

Q.10 A teacher following the GTM mandates that students memorize lengthy bilingual vocabulary lists and translate complex literary passages from their mother tongue (L1) to the target language (L2) in a rigid, literal manner. Which core objective of modern language pedagogy is fundamentally excluded by this GTM practice?

- Ans
- 1. Promoting spontaneous oral fluency.
 - 2. Utilizing receptive reading skills.
 - 3. Focusing on grammatical structure.
 - 4. Stressing vocabulary memorization.

Question ID : 4410091550940
Option 1 ID : 4410096126030
Option 2 ID : 4410096126027
Option 3 ID : 4410096126029
Option 4 ID : 4410096126028

Q.11 How does pedagogical leadership fundamentally differ from traditional instructional leadership in shaping a school's learning culture?

- Ans
- 1. It prioritizes administrative compliance over teaching innovation
 - 2. It focuses mainly on improving standardized test results
 - 3. It focuses on values, community involvement, and the purpose of learning
 - 4. It strictly follows prescribed teaching methods for classroom delivery

Question ID : 4410091604000

Option 1 ID : 4410096335193

Option 2 ID : 4410096335191

Option 3 ID : 4410096335190

Option 4 ID : 4410096335192

Q.12 Which aspect of Social Studies enables students to understand social issues by drawing upon concepts from history, geography, economics, and civics?

- Ans
- 1. Its interdisciplinary nature
 - 2. Its role in national integration
 - 3. Its focus on inquiry-based learning
 - 4. Its emphasis on civic responsibility

Question ID : 4410091690663

Option 1 ID : 4410096668822

Option 2 ID : 4410096668825

Option 3 ID : 4410096668824

Option 4 ID : 4410096668823

Q.13 The primary-level Environmental Studies (EVS) curriculum mainly aims to:

- Ans
- 1. Develop awareness of the child's immediate environment
 - 2. Promote detailed study of environmental laws and policies
 - 3. Emphasise factual memorisation of ecological terminology
 - 4. Prepare learners for advanced environmental science courses

Question ID : 4410091583200

Option 1 ID : 4410096254149

Option 2 ID : 4410096254150

Option 3 ID : 4410096254151

Option 4 ID : 4410096254148

Q.14 During a micro-teaching session, Ms. Rao begins her lesson by relating a new vocabulary word to a recent festival celebrated in the community, asking students how they felt during that event. Which micro-teaching skill is she primarily demonstrating in this scenario?

- Ans
- 1. Skill of Stimulus Variation
 - 2. Skill of Explanation
 - 3. Skill of Introducing a Lesson
 - 4. Skill of Reinforcement

Question ID : 4410091618403
Option 1 ID : 4410096392485
Option 2 ID : 4410096392484
Option 3 ID : 4410096392483
Option 4 ID : 4410096392486

Q.15 Which of the following best illustrates the significance of integrating environmental studies with other subjects in the elementary curriculum?

- Ans
- 1. It helps students see real-world connections across disciplines
 - 2. Restricting EVS activities to indoor classroom exercises
 - 3. Teaching EVS only as a separate subject
 - 4. Covering EVS concepts after finishing all other subjects

Question ID : 4410091646418
Option 1 ID : 4410096501910
Option 2 ID : 4410096501912
Option 3 ID : 4410096501911
Option 4 ID : 4410096501913

Q.16 When measuring school effectiveness, which combination of indicators would most accurately reflect both academic success and a positive school culture?

- Ans
- 1. Number of extracurricular activities offered to all students
 - 2. Student achievement data plus stakeholder views on school climate
 - 3. Only standardized test scores for measuring school performance
 - 4. Teacher workload stats plus budget allocation reports data

Question ID : 4410091611105
Option 1 ID : 4410096363277
Option 2 ID : 4410096363278
Option 3 ID : 4410096363275
Option 4 ID : 4410096363276

Q.17 Which strategy best evaluates higher-order thinking through open-ended questions?

- Ans
- 1. Peer review method
 - 2. Closed-ended grading
 - 3. Rubric-based assessment
 - 4. Automated scoring

Question ID : 4410091635528
Option 1 ID : 4410096460132
Option 2 ID : 4410096460133
Option 3 ID : 4410096460131
Option 4 ID : 4410096460134

Q.18 A school district has implemented a policy that allocates extracurricular resources equally among schools, regardless of the socioeconomic status of their students. Which approach to equality and justice does this policy most likely reflect?

- Ans
- 1. Compensatory justice for marginalized students
 - 2. Equity-based redistribution for low-income schools
 - 3. Formal equality in resource allocation
 - 4. Procedural fairness in decision making

Question ID : 4410091614915
Option 1 ID : 4410096378458
Option 2 ID : 4410096378460
Option 3 ID : 4410096378457
Option 4 ID : 4410096378459

Q.19 How does justice in society differ from equality?

- Ans
- 1. Justice is for punishment, equality for rights
 - 2. Justice is a legal term, equality is a social goal
 - 3. Justice is fairness; equality is sameness
 - 4. Justice ignores individual needs, equality does not

Question ID : 4410091638503
Option 1 ID : 4410096471699
Option 2 ID : 4410096471701
Option 3 ID : 4410096471698
Option 4 ID : 4410096471700

Q.20 Which of the following best summarizes the objectives of language teaching-learning in schools?

- Ans
- 1. Prioritize memorization of literary texts and rules of language and structure
 - 2. Focus only on grammar, vocabulary, and reading comprehension
 - 3. Train students exclusively for academic writing and exams
 - 4. Develop listening, reading, writing, speaking, creativity, and understanding

Question ID : 4410091579670

Option 1 ID : 4410096239975

Option 2 ID : 4410096239973

Option 3 ID : 4410096239976

Option 4 ID : 4410096239974

Section : Discipline5

Q.1 During an English lesson, a teacher plays a recorded story for the students and then asks them to answer questions about the plot. This approach is most closely associated with which category of teaching aids?

- Ans
- 1. Digital aids
 - 2. Visual aids
 - 3. Tactile/Kinesthetic aids
 - 4. Auditory aids

Question ID : 4410091609109

Option 1 ID : 4410096355355

Option 2 ID : 4410096355353

Option 3 ID : 4410096355354

Option 4 ID : 4410096355352

Q.2 Which of the following activities is an example of recreational mathematics in the classroom?

- Ans
- 1. Solving structured word problems
 - 2. Playing number-based puzzles
 - 3. Memorizing multiplication tables
 - 4. Listening to teacher explanations

Question ID : 4410091616575

Option 1 ID : 4410096385211

Option 2 ID : 4410096385210

Option 3 ID : 4410096385212

Option 4 ID : 4410096385213

Q.3 Which of the following activities is commonly organized by science and eco-clubs in schools?

- Ans
- 1. Organizing inter-school sports competitions
 - 2. Conducting experiments and awareness programs
 - 3. Planning annual cultural festivals
 - 4. Holding language and literature debates

Question ID : 4410091551120
Option 1 ID : 4410096126720
Option 2 ID : 4410096126719
Option 3 ID : 4410096126722
Option 4 ID : 4410096126721

Q.4 Formative assessment techniques primarily utilize what feedback mechanism distinguishing it from summative judgment?

- Ans
- 1. Standardized comparison against population benchmarks
 - 2. Descriptive elicitation guiding instructional adjustments
 - 3. Numerical scoring ranking peer performance levels
 - 4. Final certification verifying endpoint mastery achieved

Question ID : 4410091564636
Option 1 ID : 4410096180131
Option 2 ID : 4410096180128
Option 3 ID : 4410096180129
Option 4 ID : 4410096180130

Q.5 A teacher often assigns leadership roles to boys and supportive tasks to girls. This classroom practice :

- Ans
- 1. Supports inclusive decision-making
 - 2. Reinforces gender stereotypes
 - 3. Promotes equality
 - 4. Encourages democratic participation

Question ID : 4410091570303
Option 1 ID : 4410096202200
Option 2 ID : 4410096202198
Option 3 ID : 4410096202197
Option 4 ID : 4410096202199

Q.6 A school wants to ensure CwSN can participate fully in classroom activities. Which combination of actions best supports this goal?

- Ans
- 1. Adjusting lesson formats, providing accessible materials, and allowing accommodations
 - 2. Reducing the curriculum content, limiting technology use, and having no support staff
 - 3. Ignoring special needs, using only written assessments, and keeping standard seating
 - 4. Assigning more homework, using one teaching style, and removing group work

Question ID : 4410091633913
Option 1 ID : 4410096453742
Option 2 ID : 4410096453745
Option 3 ID : 4410096453744
Option 4 ID : 4410096453743

Q.7 Which of the following is a disadvantage of a science kit?

- Ans
- 1. It makes learning more effective for students
 - 2. It may require frequent replacement of small components
 - 3. It always offers hands-on learning opportunities for students
 - 4. It consistently improves the clarity of scientific explanations

Question ID : 4410091548334
Option 1 ID : 4410096116046
Option 2 ID : 4410096116047
Option 3 ID : 4410096116045
Option 4 ID : 4410096116048

Q.8 Which of the following assessment techniques is most appropriate for evaluating higher-order cognitive skills?

- Ans
- 1. Observation
 - 2. Checklists
 - 3. Oral questioning
 - 4. Essay questions

Question ID : 4410091669663
Option 1 ID : 4410096589537
Option 2 ID : 4410096589538
Option 3 ID : 4410096589536
Option 4 ID : 4410096589539

Q.9 Which of the following best illustrates the social construction of femininity in schools?

- Ans
- 1. Encouraging girls to participate more in arts than in sports
 - 2. Providing equal opportunities in all subjects
 - 3. Allowing students to choose any extracurricular activity
 - 4. Assigning science projects to all students regardless of gender

Question ID : 4410091688066
Option 1 ID : 4410096659050
Option 2 ID : 4410096659051
Option 3 ID : 4410096659052
Option 4 ID : 4410096659053

Q.10 In an Indian classroom with students from various linguistic backgrounds, which instructional strategy most effectively promotes inclusive participation and minimizes inequality of learning opportunities?

- Ans
- 1. Limiting activities to monolingual approaches
 - 2. Focusing on individual academic performance
 - 3. Assigning tasks by language proficiency
 - 4. Using flexible grouping for collaborative projects

Question ID : 4410091617467
Option 1 ID : 4410096388770
Option 2 ID : 4410096388769
Option 3 ID : 4410096388768
Option 4 ID : 4410096388767

Q.11 How are individual differences among students perceived in inclusive education?

- Ans
- 1. As problems needing strict correction and control
 - 2. As obstacles preventing efficient classroom management
 - 3. As a source of richness and diversity for learning
 - 4. As reasons to separate students into groups

Question ID : 4410091572501
Option 1 ID : 4410096210934
Option 2 ID : 4410096210932
Option 3 ID : 4410096210935
Option 4 ID : 4410096210933

Q.12 When science is understood as knowledge that must be verifiable, testable, and reproducible, it emphasises its:

- Ans
- 1. Emphasis on rote memorisation
 - 2. Empirical foundation
 - 3. Reliance on authoritative claims
 - 4. Subjective orientation

Question ID : 4410091550535
Option 1 ID : 4410096124602
Option 2 ID : 4410096124600
Option 3 ID : 4410096124601
Option 4 ID : 4410096124599

Q.13 A school committee is developing guidelines to foster gender inclusion through curriculum and classroom processes. Which policy recommendation would be most effective in challenging the subtle reproduction of gender bias in daily teaching practices?

- Ans
- 1. Mandating the use of gender-neutral uniforms for all without addressing classroom interactions
 - 2. Integrating regular teacher training session on recognizing and addressing implicit gender bias
 - 3. Increasing the number of female authors in the reading list of every subject in the classroom
 - 4. Organizing extracurricular activities strictly along gender lines for administrative convenience

Question ID : 4410091617314
Option 1 ID : 4410096388156
Option 2 ID : 4410096388155
Option 3 ID : 4410096388157
Option 4 ID : 4410096388158

Q.14 A teacher integrates pattern recognition and symbolic representation in lessons on sequences. What cognitive benefit does this approach offer according to the educational importance of mathematics?

- Ans
- 1. Limitation of creativity in problem-solving
 - 2. Cultivation of mental discipline and lateral thinking
 - 3. Reduction of cognitive load through routine
 - 4. Improvement of recall speed only

Question ID : 4410091633488
Option 1 ID : 4410096452069
Option 2 ID : 4410096452067
Option 3 ID : 4410096452068
Option 4 ID : 4410096452066

Q.15 What is the primary reason for using teaching aids in language classes?

- Ans
- 1. To replace traditional teaching methods
 - 2. To focus solely on vocabulary
 - 3. To eliminate the need for textbooks
 - 4. To enhance learners' learning process

Question ID : 4410091638172
Option 1 ID : 4410096470313
Option 2 ID : 4410096470312
Option 3 ID : 4410096470311
Option 4 ID : 4410096470310

Q.16 Which of the following statements best describes the nature of science?

- Ans
- 1. Science is only a collection of facts and theories that students memorize.
 - 2. Science only deals with abstract concepts and not real-world phenomena.
 - 3. Science is purely theoretical and does not require practical activities or observation.
 - 4. Science is a systematic process of learning through observation, experimentation, and reasoning.

Question ID : 4410091581943
Option 1 ID : 4410096249015
Option 2 ID : 4410096249018
Option 3 ID : 4410096249017
Option 4 ID : 4410096249016

Q.17 Which classroom scenario reflects the social construction of femininity?

- Ans
- 1. Boys given leadership
 - 2. Mixed-gender sports
 - 3. Girls praised for quietness
 - 4. Encouraged open debate

Question ID : 4410091635758
Option 1 ID : 4410096461022
Option 2 ID : 4410096461021
Option 3 ID : 4410096461019
Option 4 ID : 4410096461020

Q.18 How does mathematics validate truth?

- Ans
- 1. By only using experiments
 - 2. By relying on logical reasoning
 - 3. By focusing only on daily life examples
 - 4. By ignoring systematic study

Question ID : 4410091633941
Option 1 ID : 4410096453854
Option 2 ID : 4410096453855
Option 3 ID : 4410096453857
Option 4 ID : 4410096453856

Q.19 What intervention does the educational reform advocate for learning failures caused by lack of diverse materials (e.g., Braille) and rigid teaching styles?

- Ans
- 1. Segregated instruction
 - 2. A medicalized solution
 - 3. Individualized curriculum
 - 4. Social Model intervention

Question ID : 4410091560394
Option 1 ID : 4410096163714
Option 2 ID : 4410096163715
Option 3 ID : 4410096163717
Option 4 ID : 4410096163716

Q.20 If a group creates their own math riddles and shares them, what learning approach are they using?

- Ans
- 1. They are applying creativity through play.
 - 2. They are copying from a textbook.
 - 3. They are practicing silent memorization.
 - 4. They are ignoring group activities.

Question ID : 4410091639178
Option 1 ID : 4410096474285
Option 2 ID : 4410096474286
Option 3 ID : 4410096474287
Option 4 ID : 4410096474288