

Adda247

Test Prime

ALL EXAMS, ONE SUBSCRIPTION



1,00,000+
Mock Tests



**Personalised
Report Card**



**Unlimited
Re-Attempt**



600+
Exam Covered



25,000+ Previous
Year Papers



500%
Refund



ATTEMPT FREE MOCK NOW

Answers

- 1. 41 - 287 - 279 - 289
- 2. 16 - 112 - 111 - 121
- 3. 50 - 300 - 294 - 303
- 4. 38 - 304 - 298 - 308

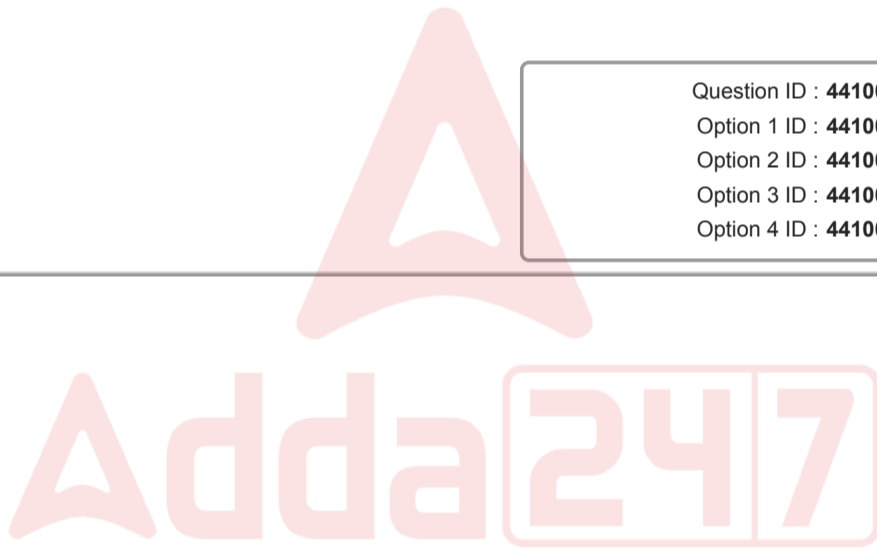
Question ID : 441009528653
 Option 1 ID : 4410092070019
 Option 2 ID : 4410092070016
 Option 3 ID : 4410092070018
 Option 4 ID : 4410092070017

Q What will come in the place of '?' in the following equation, if '+' and '÷' are interchanged and '-' and '×' are interchanged?

3
 $20 - 2 \times 85 + 5 \div 15 = ?$ 3955

- Answers
- 1. 35
 - 2. 38
 - 3. 30
 - 4. 28

Question ID : 441009554420
 Option 1 ID : 4410092172995
 Option 2 ID : 4410092172994
 Option 3 ID : 4410092172996
 Option 4 ID : 4410092172997



Q Based on the English alphabetical order, three of the following four letter-clusters are alike in a certain way and thus form a group. Which letter-cluster DOES NOT belong to that group?

4 (Note: The odd one out is not based on the number of consonants/vowels or their position in the letter-cluster.)

- Answers
- 1. LPR
 - 2. KNQ
 - 3. ORU
 - 4. BEH

Question ID : 441009764837
 Option 1 ID : 4410093013341
 Option 2 ID : 4410093013343
 Option 3 ID : 4410093013342
 Option 4 ID : 4410093013344

Q Select the pair which follows the same pattern as that followed by the two set of pairs given below. Both . pairs follow the same pattern.

5 JIF-IHE
ONK-NMJ12993

- A n s
- 1. AYU-ZYV
 - 2. AYU-YXU
 - 3. AZW-ZYV
 - 4. AZW-YYU

Question ID : 441009767142
 Option 1 ID : 4410093022563
 Option 2 ID : 4410093022564
 Option 3 ID : 4410093022561
 Option 4 ID : 4410093022562



Q Select the correct mirror image of the given figure when the mirror is placed at MN as shown below.

6

A n s

- 1.
- 2.
- 3.

✓ 4.



Question ID : 441009864845
 Option 1 ID : 4410093412481
 Option 2 ID : 4410093412482
 Option 3 ID : 4410093412483
 Option 4 ID : 4410093412480

Q What should come in place of '?' in the given series?

.
 7 397 398 371 496 ? 882

A ✓ 1. 153

✗ 2. 517

✗ 3. 150

✗ 4. 596

n

s

Question ID : 4410091528163
 Option 1 ID : 4410096035848
 Option 2 ID : 4410096035845
 Option 3 ID : 4410096035847
 Option 4 ID : 4410096035846

Q I and J are sisters. J is married to K. L is K's father. M is the wife of L. N is M's daughter. How is N related to J?

✗ 1. Sister

✗ 2. Father's sister

✓ 3. Husband's sister

✗ 4. Mother's mother

8

A

n

s

Question ID : 441009832721
 Option 1 ID : 4410093284098
 Option 2 ID : 4410093284096
 Option 3 ID : 4410093284097
 Option 4 ID : 4410093284099

Q Each of H, U, S, B, A, N and D has an exam on a different day of a week starting from Monday and ending . on Sunday of the same week. Only two people have exams between B and N. Only two people have 9 exams between S and A. Only two people have exams between D and A. No one has an exam after D. H has an exam on one of the days before U. N has an exam immediately after U. Who has an exam on Wednesday?

A n s

1. H

2. B

3. D

4. S

Question ID : 4410091518877

Option 1 ID : 4410095998782

Option 2 ID : 4410095998784

Option 3 ID : 4410095998785

Option 4 ID : 4410095998783

Q This question is based on the following words.

. PIC WRY WAS JOY

1

0 In each of the words, each vowel is changed to the second letter following it in the English alphabetical order and each consonant is changed to the letter immediately preceding it in the English alphabetical order. In how many letter-clusters thus formed, will no vowel appear?⁹⁵⁸⁸

A n s

1. One

2. Two

3. Four

4. Three

Question ID : 441009795572

Option 1 ID : 4410093136287

Option 2 ID : 4410093136288

Option 3 ID : 4410093136290

Option 4 ID : 4410093136289

Q Refer to the following letter series and answer the question that follows. Counting to be done from left to right only.

1
1 (Left) M R E S I C G T B Y Z O U K X W A Q D F H (Right)

How many such consonants are there, each of which is immediately preceded by a vowel and also immediately followed by a consonant?

- A 1. 3
n
s
 2. 4
 3. 1
 4. 2

Question ID : 441009216397
Option 1 ID : 441009849629
Option 2 ID : 441009849630
Option 3 ID : 441009849627
Option 4 ID : 441009849628

Q Which of the following letter-number clusters will replace the question mark (?) in the given series to make it logically complete?

1
2 IQX33 , LTA49 , OWD65 , RZG81 , ?

- A 1. VCJ97
n
s
 2. UDJ97
 3. UCJ97
 4. UCK97

Question ID : 4410091519084
Option 1 ID : 4410095999599
Option 2 ID : 4410095999600
Option 3 ID : 4410095999598
Option 4 ID : 4410095999601

Q Seven boxes, F, I, L, T, E, R and S, are kept one over the other but not necessarily in the same order. Only two boxes are kept below S. Only one box is kept above I. Only one box is kept between I and F. T is kept just above E. L is kept at some place below R. How many boxes are kept between R and T?

3

A 1. Three

n 2. Four

s 3. Two

4. One

Question ID : 4410091518837
 Option 1 ID : 4410095998628
 Option 2 ID : 4410095998629
 Option 3 ID : 4410095998627
 Option 4 ID : 4410095998626

Q The position(s) of how many letters will remain unchanged if each letter in the word THURSDAY is . arranged in the English alphabetical order?

1
4

A 1. One

n 2. Zero

s 3. Two

4. Three

Question ID : 441009763964
 Option 1 ID : 4410093009850
 Option 2 ID : 4410093009849
 Option 3 ID : 4410093009851
 Option 4 ID : 4410093009852



Q Based on the alphabetical order, three of the following four are alike in a certain way and thus form a . group. Which is the one that does not belong to that group?
 1 (Note: The odd man out is not based on the number of consonants/vowels or their position in the letter 5 cluster.)8503

A 1. YBW

n 2. NPL

s 3. DFB

4. GIE

Question ID : 441009782365
 Option 1 ID : 4410093083463
 Option 2 ID : 4410093083466
 Option 3 ID : 4410093083464
 Option 4 ID : 4410093083465

Q If 'A' stands for '+', 'B' stands for 'x', 'C' stands for '+' and 'D' stands for '-', what will come in place of . question mark '?' in the following equation?

1 18 B 2 D 4 A 2 C 8 = ?

6

A 1. 34

n

s

2. 38

3. 40

4. 42

Question ID : 4410091606200
 Option 1 ID : 4410096343824
 Option 2 ID : 4410096343825
 Option 3 ID : 4410096343826
 Option 4 ID : 4410096343827



Q H, I, J, K, Q, R and S are sitting around a circular table facing the centre of the table. Only two people sit . between Q and I when counted from the right of Q. Only three people sit between H and S when counted 1 from the right of S. I sits to the immediate right of S. R sits to the immediate right of K. Who sits fourth to 7 the right of J?

A 1. H

n

s

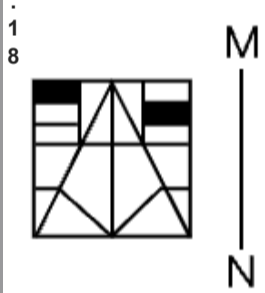
2. K

3. R

4. O

Question ID : 4410091618809
 Option 1 ID : 4410096394108
 Option 2 ID : 4410096394109
 Option 3 ID : 4410096394111
 Option 4 ID : 4410096394110

Q Select the correct mirror image of the given figure when the mirror is placed at MN as shown below.



- A
n
s
- 1.
 - 2.
 - 3.
 - 4.



Question ID : 4410091377931
 Option 1 ID : 4410095518980
 Option 2 ID : 4410095518977
 Option 3 ID : 4410095518978
 Option 4 ID : 4410095518979

Q In a certain code language, 'BAIL' is coded as '1856' and 'LAID' is coded as '8517'. What is the code for 'D' in that language?

- 1
9
A 1. 8
n
s
 2. 6
 3. 5
 4. 7

Question ID : 4410091619039
 Option 1 ID : 4410096395030
 Option 2 ID : 4410096395029
 Option 3 ID : 4410096395031
 Option 4 ID : 4410096395028

Q Each vowel in the word AZOTEMIA is changed to the letter immediately following it in the English alphabetical order and each consonant is changed to the second letter preceding it in the English alphabetical order. Which of the following letters will appear exactly twice in the new group of letters thus formed?

- A 1. R
n
s
 2. F
 3. B
 4. P

Question ID : 441009216473
 Option 1 ID : 441009849933
 Option 2 ID : 441009849934
 Option 3 ID : 441009849931
 Option 4 ID : 441009849932

Q The Phillips Curve shows the relationship between:

1

A 1. Inflation and unemployment

n

s

2. Unemployment and wage growth

3. Wage growth and productivity

4. Inflation and interest rates

Question ID : 4410091120655

Option 1 ID : 4410094418506

Option 2 ID : 4410094418507

Option 3 ID : 4410094418508

Option 4 ID : 4410094418505

Q During public demonstrations opposing the Simon Commission, which of the following freedom fighters was injured and later succumbed to those wounds?

2

A 1. Motilal Nehru

n

s

2. Lala Lajpat Rai

3. C. Rajagopalachari

4. Bal Gangadhar Tilak

Question ID : 4410091551234

Option 1 ID : 4410096127220

Option 2 ID : 4410096127222

Option 3 ID : 4410096127221

Option 4 ID : 4410096127219

Q Which type of chemical bond is formed by the complete transfer of one or more electrons from one atom to another?

3

A 1. Metallic bond

n

s

2. Coordinate bond

3. Ionic bond

4. Covalent bond

Question ID : 441009616702

Option 1 ID : 4410092420980

Option 2 ID : 4410092420978

Option 3 ID : 4410092420979

Option 4 ID : 4410092420977

Q Who led the Indian women's squad to the 2025 ICC ODI Cricket World Cup title?

4

A ✓ 1. Harmanpreet Kaur

n

s

✗ 2. Smriti Mandhana

✗ 3. Deepti Sharma

✗ 4. Shafali Verma

Question ID : 4410091546901

Option 1 ID : 4410096110474

Option 2 ID : 4410096110475

Option 3 ID : 4410096110473

Option 4 ID : 4410096110472

Q 'Aatmanirbhar Bharat Rojgar Yojana' was launched as a part of _____.

5

A ✗ 1. Aatmanirbhar Bharat 4.0 package

n

s

✗ 2. Aatmanirbhar Bharat 1.0 package

✓ 3. Aatmanirbhar Bharat 3.0 package

✗ 4. Aatmanirbhar Bharat 2.0 package

Question ID : 441009637836

Option 1 ID : 4410092505490

Option 2 ID : 4410092505487

Option 3 ID : 4410092505489

Option 4 ID : 4410092505488

Q Which enemy kingdom's forces were shattered by Krishnadevaraya first during his military campaigns?

6

A ✗ 1. Berar

n

s

✗ 2. Ahmednagar

✗ 3. Golconda

✓ 4. Bijapur

Question ID : 441009205159

Option 1 ID : 441009806859

Option 2 ID : 441009806857

Option 3 ID : 441009806858

Option 4 ID : 441009806860

Q Dockyard was found at which of the following Indus Valley Civilisation cities?

7

A ✗ 1. Sutkagan Dor

n

s

- 2. Alamgirpur
- 3. Lothal
- 4. Mohenjo Daro

Question ID : 441009606129
 Option 1 ID : 4410092379635
 Option 2 ID : 4410092379636
 Option 3 ID : 4410092379634
 Option 4 ID : 4410092379633

Q Which material was commonly used to make Harappan seals?

.
8
A
n
s

- 1. Clay
- 2. Steatite
- 3. Gold
- 4. Copper

Question ID : 441009632635
 Option 1 ID : 4410092484684
 Option 2 ID : 4410092484685
 Option 3 ID : 4410092484683
 Option 4 ID : 4410092484686

Q Which was the main mosque of Jahanpanah, the new capital built by Muhammad Tughluq?

.
9
A
n
s

- 1. Begumpuri Mosque
- 2. Mecca Masjid
- 3. Moti Masjid
- 4. Quwwat al-Islam Mosque

Question ID : 441009205178
 Option 1 ID : 441009806934
 Option 2 ID : 441009806935
 Option 3 ID : 441009806936
 Option 4 ID : 441009806933

Q Indian Space Research Organisation (ISRO) along with which space organisation developed the Synthetic Aperture RADAR (NISAR), which is tentatively scheduled for launch in June 2025?

.
10
A
n
s

- 1. Canadian Space Agency
- 2. Luxembourg Space Agency
- 3. Israel Space Agency
- 4. National Aeronautics and Space Administration

Option 3 ID : 4410091195518
Option 4 ID : 4410091195515


Q Which of the statements given below is/are NOT correct with respect to the 73rd Constitutional Amendment Act, 1992?

1. It provided constitutional status to Panchayati Raj Institutions (PRIs).
2. It added Part IX to the Constitution, titled "The Panchayats."
3. It mandates the reservation of one-third of seats for women in Panchayats and Municipalities.

A n s

- 1. Only 3
- 2. 1, 2, and 3
- 3. Only 2
- 4. 1 and 2 only

Question ID : 441009397436
Option 1 ID : 4410091555185
Option 2 ID : 4410091555187
Option 3 ID : 4410091555184
Option 4 ID : 4410091555186



Q What was the total population of India according to the Census 2011?

- 1
 - 2
- A n s
- 1. 121.09 crore
 - 2. 100.45 crore
 - 3. 110.23 crore
 - 4. 132.42 crore

Question ID : 441009637676
Option 1 ID : 4410092504848
Option 2 ID : 4410092504847
Option 3 ID : 4410092504850
Option 4 ID : 4410092504849

Q Which of the following is National Housing Bank's (NHB) Financial Year?

- 1
 - 3
- A n s
- 1. July 01 to June 30

- ✓ 2. April 01 to March 31
- ✗ 3. October 01 to September 30
- ✗ 4. January 01 to December 31

Question ID : 441009628177
 Option 1 ID : 4410092466862
 Option 2 ID : 4410092466861
 Option 3 ID : 4410092466863
 Option 4 ID : 4410092466860

Q Which city hosted the 2025 World Circular Economy Forum?

- .
1
4
A n s
- ✗ 1. Nairobi, Kenya
 - ✗ 2. Tokyo, Japan
 - ✗ 3. Helsinki, Finland
 - ✓ 4. São Paulo, Brazil

Question ID : 441009272817
 Option 1 ID : 4410091059810
 Option 2 ID : 4410091059808
 Option 3 ID : 4410091059809
 Option 4 ID : 4410091059807

Q Which of the following Zonal Headquarters of Indian Railways is located in the Chhattisgarh state?

- .
1
5
A n s
- ✗ 1. West Central Railway
 - ✗ 2. South Western Railway
 - ✗ 3. South Central Railway
 - ✓ 4. South-East Central Railway

Question ID : 441009638793
 Option 1 ID : 4410092509315
 Option 2 ID : 4410092509318
 Option 3 ID : 4410092509316

Option 4 ID : 4410092509317

Q Joseph Priestley was the first to report the discovery of which element and describe some of its . extraordinary properties in 1774?

1
6A 1. Neonn
s 2. Helium 3. Krypton 4. Oxygen

Question ID : 441009624547

Option 1 ID : 4410092452321

Option 2 ID : 4410092452322

Option 3 ID : 4410092452323

Option 4 ID : 4410092452320

Q Which Article of the Indian Constitution describes the responsibility of the Chief Minister to keep the . Governor informed about decisions of the Council of Ministers, provide details on state administration, 1 and refer matters to the Council when asked?

7

A 1. Article 145n
s 2. Article 123 3. Article 167 4. Article 134

Question ID : 441009501686

Option 1 ID : 4410091961917

Option 2 ID : 4410091961914

Option 3 ID : 4410091961916

Option 4 ID : 4410091961915

Q India called back its High Commissioner to Canada following a diplomatic clash with Canada in 2024.

. What is the name of that High Commissioner?

1
8

- A n s
- 1. Ajay Sharma
 - 2. Sanjay Verma
 - 3. Chinmoy Naik
 - 4. Arun Bahuguna

Question ID : 441009217413
Option 1 ID : 441009853608
Option 2 ID : 441009853609
Option 3 ID : 441009853611
Option 4 ID : 441009853610

Q Which Article of the Indian Constitution mentions that Ministers shall be appointed by the Governor on the advice of the Chief Minister?

1
9

- A n s
- 1. Article 166
 - 2. Article 164
 - 3. Article 160
 - 4. Article 162

Question ID : 441009502258
Option 1 ID : 4410091964205
Option 2 ID : 4410091964204
Option 3 ID : 4410091964202
Option 4 ID : 4410091964203

Q Which organisation carried out a high-speed rocket-sled test for a fighter jet escape system in December 2025?

20

- Answers
- 1. Hindustan Aeronautics Limited
 - 2. Indian Space Research Organisation
 - 3. Bharat Electronics Limited
 - 4. Defence Research and Development Organisation

Question ID : 4410091564741
 Option 1 ID : 4410096180538
 Option 2 ID : 4410096180535
 Option 3 ID : 4410096180536
 Option 4 ID : 4410096180537

Section : Arithmetical and Numerical Ability

Q If 7, 12, 21 and x are in proportion, the value of x is:

1

- Answers
- 1. 35
 - 2. 27
 - 3. 24
 - 4. 36

Question ID : 441009194366
 Option 1 ID : 441009765413
 Option 2 ID : 441009765414
 Option 3 ID : 441009765412
 Option 4 ID : 441009765411

Q A dishonest dealer claims to sell his goods at the cost price but uses a weight of 800 g instead of 1 kg. What is his gain percentage.

2

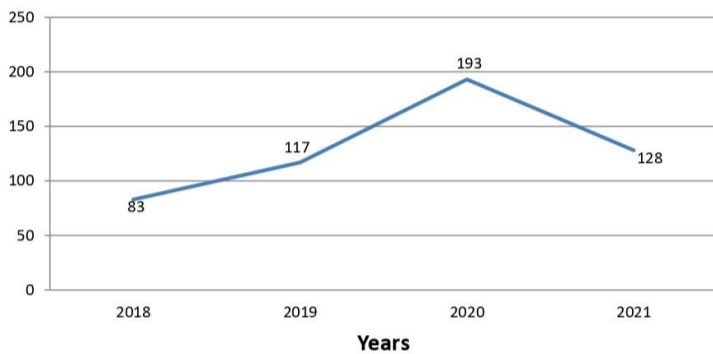
- Answers
- 1. 11%
 -
 -
 -

✓ 4. 25%

Question ID : 4410091639936
 Option 1 ID : 4410096476946
 Option 2 ID : 4410096476948
 Option 3 ID : 4410096476947
 Option 4 ID : 4410096476949

Q The line graph shows the number of vacancies for executives in a certain company. Study the diagram and answer the question that follows.

3 Number of Vacancies



In which year was the number of vacancies lesser than that of the previous year?

- Answers
- ✓ 1. 2021
 - ✗ 2. 2018
 - ✗ 3. 2020
 - ✗ 4. 2019

Question ID : 441009364179
 Option 1 ID : 4410091422969
 Option 2 ID : 4410091422966
 Option 3 ID : 4410091422968
 Option 4 ID : 4410091422967

Q The average weight of a family of five members whose weights are 40 kg, 49 kg, 57 kg, 76 kg and 36 kg is:

- Answers
- ✗ 1. 50.6 kg
 - ✓ 2. 51.6 kg
 - ✗ 3. 52.6 kg
 - ✗ 4. 53.6 kg

Question ID : 441009582038
 Option 1 ID : 4410092283280
 Option 2 ID : 4410092283278
 Option 3 ID : 4410092283279
 Option 4 ID : 4410092283281

QA and B complete a work in 2 days. If A alone can do it in 12 days, then B alone can do 80-times of the

5 . same work in _____ days.4032

5

A 1. 112

n

s

2. 192

3. 193

4. 96

Question ID : 441009897345

Option 1 ID : 4410093543453

Option 2 ID : 4410093543450

Option 3 ID : 4410093543452

Option 4 ID : 4410093543451

6 Q A rectangular piece of paper, 11 cm × 4 cm is folded without overlapping to make a cylinder of height 4 . cm. Find the volume of the cylinder.

$\left(\text{Use } \pi = \frac{22}{7} \right)$

A 1. 33.5 cm³

n

s

2. 35.5 cm³

3. 18.5 cm³

4. 38.5 cm³

Question ID : 441009621342

Option 1 ID : 4410092439502

Option 2 ID : 4410092439503

Option 3 ID : 4410092439501

Option 4 ID : 4410092439500

7 Q If the 8-digit number 40569p14 is divisible by 3, then the maximum value of p is:

7

A 1. 6

n

s

✓ 2.7

✗ 3.4

✗ 4.5

Question ID : 441009895830
Option 1 ID : 4410093537392
Option 2 ID : 4410093537390
Option 3 ID : 4410093537391
Option 4 ID : 4410093537393

Q By how much is 30% of 80 greater than 20% of 45?5757

.

8

A ✓ 1. 15

n

s

✗ 2. 12

✗ 3. 10

✗ 4. 17

Question ID : 441009857039
Option 1 ID : 4410093381128
Option 2 ID : 4410093381130
Option 3 ID : 4410093381129
Option 4 ID : 4410093381131

Q A shopkeeper marks a bag at ₹3,000 and offers a discount of 25%. He still makes a profit of 20%. What is the cost price of the bag?

9

A ✗ 1. ₹1,800

n

s

✗ 2. ₹1,925

✗ 3. ₹1,600

✓ 4. ₹1,875

Question ID : 4410091546463
Option 1 ID : 4410096108736
Option 2 ID : 4410096108738
Option 3 ID : 4410096108735
Option 4 ID : 4410096108737

Q The volume (in m^3) of a cube, each of whose edges is 19 m, is:

.

1

0

A 1. 6686
n
s 2. 6678 3. 6859 4. 6780

Question ID : 441009345207
 Option 1 ID : 4410091346780
 Option 2 ID : 4410091346778
 Option 3 ID : 4410091346777
 Option 4 ID : 4410091346779

Q Ramesh sells a table to Mukesh at a profit of 44% and Mukesh sells it to Jaybind at a profit of 25%. If Jaybind pays ₹1,503 for it, then the cost price (in ₹) for Ramesh is:1345

1
1A 1. 832
n
s 2. 836 3. 837 4. 835

Question ID : 441009894658
 Option 1 ID : 4410093532703
 Option 2 ID : 4410093532704
 Option 3 ID : 4410093532705
 Option 4 ID : 4410093532702

Q A group of pilgrims planned to cover a total distance of 140 km in three stages. They covered 104 km by train at a speed of 120 km/hr, and 24 km by bus at 40 km/hr. The rest of the journey is to be completed on foot. At what speed must they walk for the overall average speed for the entire journey to be exactly 50 km/hr?

A 1. 24 km/hr
n
s 2. 9 km/hr 3. 11 km/hr 4. 10 km/hr

Question ID : 441009203324
 Option 1 ID : 441009799846
 Option 2 ID : 441009799844
 Option 3 ID : 441009799845
 Option 4 ID : 441009799843

Q In covering a distance of 80 km, Salaj takes 5 hours more than Kevin. If Salaj doubles his speed, then he . would take 3 hours less than Kevin. Salaj's original speed is:

1
3

A 1. 8 km/hr
n
s

2. 5 km/hr

3. 10 km/hr

4. 15 km/hr

Question ID : 441009209103

Option 1 ID : 441009821697

Option 2 ID : 441009821695

Option 3 ID : 441009821696

Option 4 ID : 441009821698

Q In a division sum, the divisor is 9 times the quotient and 3 times the remainder. If the remainder is 18, . what is the dividend?2753

1
4

A 1. 342
n
s

2. 346

3. 340

4. 344

Question ID : 441009560164

Option 1 ID : 4410092195923

Option 2 ID : 4410092195924

Option 3 ID : 4410092195926

Option 4 ID : 4410092195925

Q Find the number of bricks, each measuring 54 cm × 16 cm × 82 cm, required to construct a wall 82 m long, . 51 m high and 0.9 m thick, while the sand and cement mixture occupies 60% of the total volume of wall.

5

Ans ✓ 1. 21250

- ✗ 2. 21400
- ✗ 3. 21200
- ✗ 4. 21000

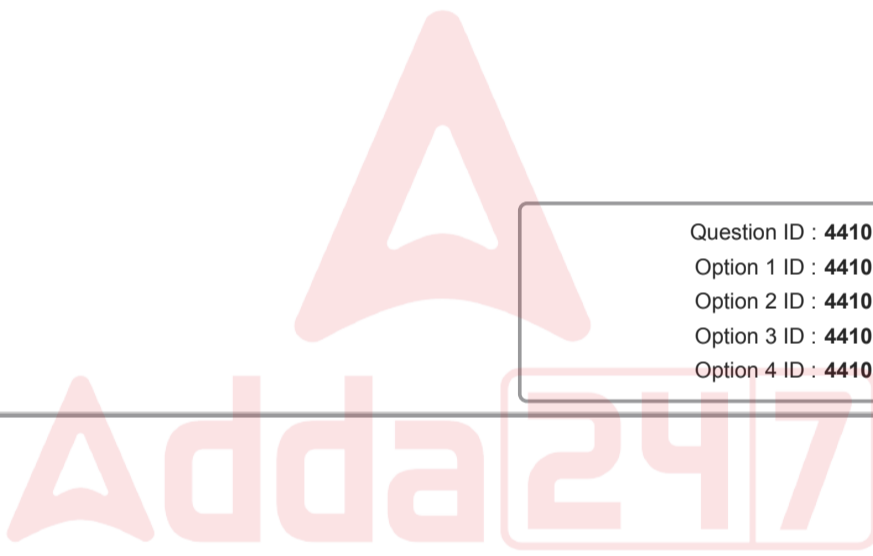
Question ID : 441009602264
 Option 1 ID : 4410092364173
 Option 2 ID : 4410092364175
 Option 3 ID : 4410092364176
 Option 4 ID : 4410092364174

Q. A, B and C can do a piece of work in 12 days, 15 days and 16 days, respectively. If A, B and C work together, then how many days will they take to complete the work?

16

- Ans
- ✗ 1. $3\frac{11}{19}$ days
 - ✗ 2. $2\frac{10}{13}$ days
 - ✗ 3. $3\frac{14}{15}$ days
 - ✓ 4. $4\frac{12}{17}$ days

Question ID : 4410091401613
 Option 1 ID : 4410095535764
 Option 2 ID : 4410095535763
 Option 3 ID : 4410095535765
 Option 4 ID : 4410095535766



Q. X, Y and Z enter into a partnership and their shares are in the ratio $\frac{1}{4} : \frac{1}{16} : \frac{1}{10}$.

17
 one – fourth of his capital and Z withdraws half of his capital. After one year from the start a profit of ₹2511 is divided among them. What is Z's share (in ₹) in the profit?

- 5117
- Ans
- ✗ 1. 493
 - ✗ 2. 464
 - ✗ 3. 433

✓ 4. 496

Question ID : 441009898430
Option 1 ID : 4410093547791
Option 2 ID : 4410093547792
Option 3 ID : 4410093547793
Option 4 ID : 4410093547790

Q Pramod has two grandsons, Ashish and Ketan. 13-year-old Ashish gets some money from Pramod's wealth, and 14-year-old Ketan gets the rest of the money. But Ashish and Ketan will get the money only 1 when they turn 24 years old. Till then, the money will be kept in a bank earning interest at the rate of 8% 8 per annum, compounded annually. When both turn 24, they receive the same amount. If the total money Pramod had was ₹23,400, how much money (in ₹) did Pramod initially give to Ketan?

A n s 1. 12,500

✓ 2. 12,150

3. 11,250

4. 11,000

Question ID : 441009543433
Option 1 ID : 4410092129130
Option 2 ID : 4410092129128
Option 3 ID : 4410092129129
Option 4 ID : 4410092129131



Q What sum of money (in ₹) will yield ₹880 as simple interest in 2 years at 5% per annum?1435

.
1
9

A n s 1. 9,200

2. 9,000

3. 8,300

✓ 4. 8,800

Question ID : 441009852717
Option 1 ID : 4410093363843
Option 2 ID : 4410093363842
Option 3 ID : 4410093363841
Option 4 ID : 4410093363840

Q At a health club, 40% of the members are women and 60% of the members are men. If the average age of the men is 55 years and the average age of the women is 41 years, what is the average age (in years) of all 2 the members?

0

- A
n
s
- 1. 41.7
 - 2. 56.2
 - 3. 60.2
 - 4. 49.4

Question ID : 441009539449
 Option 1 ID : 4410092113194
 Option 2 ID : 4410092113195
 Option 3 ID : 4410092113193
 Option 4 ID : 4410092113192

Section : English Language and Comprehension

Q Identify the misspelt word in the sentence and choose the option that has the correct spelling.
 . Although the audience appreciated his analysis, a minor inconvenience disrupted the flow of his argument.

- A
n
s
- 1. the flow of his argument.
 - 2. Although the audience appreciated
 - 3. inconvenience disrupted
 - 4. his analysis, a minor

Question ID : 4410091526631
 Option 1 ID : 4410096029645
 Option 2 ID : 4410096029642
 Option 3 ID : 4410096029644
 Option 4 ID : 4410096029643

Q Select the most appropriate verb to fill in the blank.

2 Had she ___ the report earlier, she would have been able to submit it on time.

- A
n
s
- 1. have finished
 - 2. finished
 - 3. finish
 - 4. finishes

Option 2 ID : 441009864003

Option 3 ID : 441009864005

Option 4 ID : 441009864002

Q In the given question, a statement divided into different segments is given. The first segment (A) is fixed,
. rearrange the other segments to form a coherent statement.

3

- (A) In framing the new policy, legislators debated provisions that would
(B) protect workers' rights in gig economy platforms,
(C) clarify liability for automated decision systems,
(D) and incentivize small businesses to formalize operations,
(E) aiming to balance flexibility with social protections

- A
n
s
1. ACDEB
 2. AEDCB
 3. ABCDE
 4. AEBDC

Question ID : 4410091518747

Option 1 ID : 4410095998264

Option 2 ID : 4410095998265

Option 3 ID : 4410095998262

Option 4 ID : 4410095998263

Q Select the option that can be used as a one-word substitute for the given group of words.

4 Equal in rank, merit or quality

- A
n
s
1. Peer
 2. Leader
 3. Friend
 4. Pair

Question ID : 441009432246

Option 1 ID : 4410091688505

Option 2 ID : 4410091688504

Option 3 ID : 4410091688503

Option 4 ID : 4410091688502

Q Choose the misspelt word in the sentence.

5 Sheetal received an acheivement award for her innovation and creativity.

- A n s
- 1. innovation
 - 2. acheivement
 - 3. received
 - 4. creativity

Question ID : 4410091122175
Option 1 ID : 4410094424253
Option 2 ID : 4410094424252
Option 3 ID : 4410094424251
Option 4 ID : 4410094424254

Q Choose the most appropriate option to fill in the given blanks.

6 They completed the task ___ and submitted the report ___.

- A n s
- 1. efficient, promptly
 - 2. efficiently, promptly
 - 3. efficient, prompt
 - 4. efficiently, prompt

Question ID : 4410091126929
Option 1 ID : 4410094443275
Option 2 ID : 4410094443272
Option 3 ID : 4410094443273
Option 4 ID : 4410094443274

Q Select the most appropriate article to fill in the blank. If no article is needed, select 'No article required'.

7 She gave me _____ honest opinion about my research, even though it was critical.

- A n s
- 1. a
 - 2. No article required
 - 3. the
 - 4. an

Question ID : 4410091481666
Option 1 ID : 4410095853727
Option 2 ID : 4410095853729
Option 3 ID : 4410095853726

Option 4 ID : 4410095853728

Q In the given question, a sentence is divided into different segments. The first segment (S1) is fixed.
 . Choose the most appropriate order from the options given which best rearranges the remaining segments
 8 to form a coherent sentence.

S1: When the annual monsoon arrived earlier than predicted,
 P: their sowing schedules, hoping that
 Q: the sudden shift in rainfall patterns would not disrupt
 R: farmers across the region hurried to adjust
 S: the delicate balance required for a successful harvest

A 1. QRSP

n
s

2. SRPQ

3. RSPQ

4. RPQS

Question ID : 4410091525470
 Option 1 ID : 4410096025044
 Option 2 ID : 4410096025043
 Option 3 ID : 4410096025045
 Option 4 ID : 4410096025042

Q Fill in the blank with the correct preposition.

9 The results were achieved _____ hard work and dedication.

A 1. despite

n
s

2. among

3. unless

4. through

Question ID : 4410091027467
 Option 1 ID : 4410094061410
 Option 2 ID : 4410094061408
 Option 3 ID : 4410094061411
 Option 4 ID : 4410094061409

Q Identify the antonym of the underlined word in the sentence given below.

1 The manager deprecatd the employee's suggestion during the meeting.

0

1. overlooked

S

- 2. recorded
- 3. endorsed
- 4. neglected

Question ID : 4410091639709
 Option 1 ID : 4410096476144
 Option 2 ID : 4410096476145
 Option 3 ID : 4410096476143
 Option 4 ID : 4410096476146


Q Choose the most appropriate option that best expresses the relationship similar to the original pair of words.

1 Affluent : Opulent :: Expeditious : _____

1

- A
- 1. Methodical
 - 2. Auspicious
 - 3. Delayed
 - 4. Prompt

Question ID : 4410091544276
 Option 1 ID : 4410096100198
 Option 2 ID : 4410096100200
 Option 3 ID : 4410096100197
 Option 4 ID : 4410096100199



Q Select the option that is the most appropriate antonym of the highlighted word in the given sentence.

1 His wrath frightened the entire class and created a tense atmosphere.

1

2

- A
- 1. annoyance
 - 2. calmness
 - 3. fury
 - 4. rage

Option 3 ID : 4410096332018

Option 4 ID : 4410096332017

Q Select the most appropriate option to substitute the underlined word segment in the given sentence.

. She cried suddenly on seeing her mother.

1
3

A 1. lagged behind

n

s

2. bit the bullet

3. broke into tears

4. blazed a trail

Question ID : 4410091529441

Option 1 ID : 4410096040866

Option 2 ID : 4410096040863

Option 3 ID : 4410096040864

Option 4 ID : 4410096040865

Q Choose the correct option to complete the sentence.

.
1 If you want to understand _____ importance of education, speak with _____ teachers who inspire their
4 students.

A 1. a, the

n

s

2. the, a

3. an, the

4. the, the

Question ID : 4410091671519

Option 1 ID : 4410096596773

Option 2 ID : 4410096596774

Option 3 ID : 4410096596775

Option 4 ID : 4410096596772

Q Choose the option that can replace the highlighted text with the correct idiom.

. The students were so impressed with the speaker that they listened with complete attention throughout
1 his lecture.

5

A 1. hung on every word

n

s

- 2. burnt the midnight oil
- 3. threw caution to the wind
- 4. hit below the belt

Question ID : 4410091527643
Option 1 ID : 4410096033783
Option 2 ID : 4410096033784
Option 3 ID : 4410096033785
Option 4 ID : 4410096033786

Comprehension:

Read the given passage carefully and answer the questions that follow.

Festivals are often regarded as moments of joy, but they also reveal the deeper relationship between communities and nature. In many traditional societies, harvest festivals are not simply celebrations of abundance; they are acknowledgments of dependence on soil, rain, and sunlight. Songs and dances become rituals of gratitude, reinforcing the idea that human prosperity is inseparable from ecological cycles. Yet, in the modern age, festivals increasingly drift away from this ecological awareness. Fireworks pollute the air, plastic decorations clog rivers, and excessive consumption creates more waste than reverence. What was once a reminder of humility before nature risks becoming a spectacle of excess. Still, the essence of festivals persists: the desire to connect, to remember, and to honor forces greater than ourselves. If reoriented with awareness, festivals can once again embody the balance between celebration and responsibility, reminding us that joy without sustainability is joy without continuity.

SubQuestion No : 16

Q Which of the following is the most suitable title for the passage?

.
1
6

- A n s
- 1. Pollution and Waste in Modern Festivals
 - 2. Festivals as Bridges Between Celebration and Responsibility
 - 3. Joy Without Sustainability in Human Rituals
 - 4. The Decline of Traditional Harvest Celebrations

Question ID : 4410091318725
Option 1 ID : 4410095206455
Option 2 ID : 4410095206454
Option 3 ID : 4410095206457
Option 4 ID : 4410095206456

Comprehension:

Read the given passage carefully and answer the questions that follow.

Festivals are often regarded as moments of joy, but they also reveal the deeper relationship between communities and nature. In many traditional societies, harvest festivals are not simply celebrations of abundance; they are acknowledgments of dependence on soil, rain, and sunlight. Songs and dances become rituals of gratitude, reinforcing the idea that human prosperity is inseparable from ecological cycles. Yet, in the modern age, festivals increasingly drift away from this ecological awareness. Fireworks pollute the air, plastic decorations clog rivers, and excessive consumption creates more waste than reverence. What was once a reminder of humility before nature risks becoming a spectacle of excess. Still, the essence of festivals persists: the desire to connect, to remember, and to honor forces greater than ourselves. If reoriented with awareness, festivals can once again embody the balance between celebration and responsibility, reminding us that joy without sustainability is joy without continuity.

SubQuestion No : 17

Q Identify the central theme of the passage.

.
1
7

A
n
s

- 1. Festivals are no longer relevant in the modern age of technology.
- 2. Festivals serve as spectacles of human excess without cultural meaning.
- 3. Festivals must balance joy with ecological responsibility to retain their essence.
- 4. Festivals are mainly occasions for waste and environmental pollution.

Question ID : 4410091318726

Option 1 ID : 4410095206461

Option 2 ID : 4410095206460

Option 3 ID : 4410095206458

Option 4 ID : 4410095206459

Comprehension:

Read the given passage carefully and answer the questions that follow.

Festivals are often regarded as moments of joy, but they also reveal the deeper relationship between communities and nature. In many traditional societies, harvest festivals are not simply celebrations of abundance; they are acknowledgments of dependence on soil, rain, and sunlight. Songs and dances become rituals of gratitude, reinforcing the idea that human prosperity is inseparable from ecological cycles. Yet, in the modern age, festivals increasingly drift away from this ecological awareness. Fireworks pollute the air, plastic decorations clog rivers, and excessive consumption creates more waste than reverence. What was once a reminder of humility before nature risks becoming a spectacle of excess. Still, the essence of festivals persists: the desire to connect, to remember, and to honor forces greater than ourselves. If reoriented with awareness, festivals can once again embody the balance between celebration and responsibility, reminding us that joy without sustainability is joy without continuity.

SubQuestion No : 18

Q Which fact is directly mentioned in the passage?

.
1
8

- A** 1. Festivals are universally free from environmental consequences.
- n** 2. Modern societies have abandoned all traditional rituals completely.
- s** 3. Rituals of gratitude in festivals are irrelevant to ecological cycles.
4. Harvest festivals acknowledge dependence on soil, rain, and sunlight.

Question ID : 4410091318727

Option 1 ID : 4410095206464

Option 2 ID : 4410095206463

Option 3 ID : 4410095206465

Option 4 ID : 4410095206462

Comprehension:

Read the given passage carefully and answer the questions that follow.

Festivals are often regarded as moments of joy, but they also reveal the deeper relationship between communities and nature. In many traditional societies, harvest festivals are not simply celebrations of abundance; they are acknowledgments of dependence on soil, rain, and sunlight. Songs and dances become rituals of gratitude, reinforcing the idea that human prosperity is inseparable from ecological cycles. Yet, in the modern age, festivals increasingly drift away from this ecological awareness. Fireworks pollute the air, plastic decorations clog rivers, and excessive consumption creates more waste than reverence. What was once a reminder of humility before nature risks becoming a spectacle of excess. Still, the essence of festivals persists: the desire to connect, to remember, and to honor forces greater than ourselves. If reoriented with awareness, festivals can once again embody the balance between celebration and responsibility, reminding us that joy without sustainability is joy without continuity.

SubQuestion No : 19

Q Which inference can be drawn from the passage?

.
1
9

A 1. Modern festivals create no meaningful connection between humans and nature.

n
s

2. Festivals can survive without cultural or ecological awareness.

3. Excessive consumption during festivals reflects a loss of ecological sensitivity.

4. Traditional festivals were always harmful to natural ecosystems.

Question ID : 4410091318728

Option 1 ID : 4410095206467

Option 2 ID : 4410095206468

Option 3 ID : 4410095206466

Option 4 ID : 4410095206469

remember, and to honor forces greater than ourselves. If reoriented with awareness, festivals can once again embody the balance between celebration and responsibility, reminding us that joy without sustainability is joy without continuity.

SubQuestion No : 20

Q The tone of the passage can best be described as:

.
2
0

A 1. Detached and neutral

n

s 2. Aggressive and accusatory

3. Thoughtful and cautionary

4. Casual and humorous

Question ID : 4410091318729

Option 1 ID : 4410095206473

Option 2 ID : 4410095206472

Option 3 ID : 4410095206470

Option 4 ID : 4410095206471

Section : Hindi Language and Comprehension

Q निम्न में से 'आँख के अंधे गाँठ के पूरे' लोकोक्ति का सही अर्थ कौन है?

.
1

A 1. पीछा न छोड़ना

n

s 2. मूर्ख धनवान

3. डींग हांकना

4. प्रतिवाद करना

Question ID : 4410091526471

Option 1 ID : 4410096028997

Option 2 ID : 4410096028995

Option 3 ID : 4410096028994

Option 4 ID : 4410096028996

Q "विद्यालय के पुस्तकालय __ छात्र गहन अध्ययन करके परीक्षा __ तैयारी हेतु आवश्यक नोट्स तैयार करते हैं।" रिक्त स्थान की पूर्ति उचित कारक से करें।

.
2

A 1. को, ने

n

s 2. में, की

3. ने, को

4. से, को

Question ID : 4410091413421

Option 1 ID : 4410095582693

Option 2 ID : 4410095582691

Option 3 ID : 4410095582694

Option 4 ID : 4410095582692

3. निम्नलिखित वाक्य के रिक्त स्थान में उचित परसर्ग चुनिए -

3 'मोहित बच्चों खिलौने लाया।

A
n
s

✓ 1. के लिए

✗ 2. से

✗ 3. अरे

✗ 4. भीतर

Question ID : 4410091241839

Option 1 ID : 4410094900703

Option 2 ID : 4410094900700

Option 3 ID : 4410094900701

Option 4 ID : 4410094900702

Q दिए गए वाक्य में अधिकरण कारक का चयन करके रिक्त स्थान की पूर्ति करें -

4 भारतीय दार्शनिक परंपरा -----अपार ज्ञान- संपदा संचित है।

A
n
s

✓ 1. में

✗ 2. से

✗ 3. ने

✗ 4. को

Question ID : 4410091547125

Option 1 ID : 4410096111380

Option 2 ID : 4410096111377

Option 3 ID : 4410096111379

Option 4 ID : 4410096111378

Q 'ख्याली पुलाव पकाना' मुहावरे का सही अर्थ क्या होगा?

5

A
n
s

✗ 1. बहुत तारीफ़ करना

✗ 2. कुछ घटकर होना

✓ 3. व्यर्थ कल्पना करना

✗ 4. उलटा काम करना

Question ID : 4410091624040

Option 1 ID : 4410096414742

Option 2 ID : 4410096414741

Option 3 ID : 4410096414743

Option 4 ID : 4410096414740

Q दिए गए वाक्य के लिए कारक के उचित परसर्ग का चयन कीजिए-

6 मेरा घर शहर _____ दूर है।

A
n
s

✓ 1. से

✗ 2. को

✗ 3. के लिए

✗ 4. में

Question ID : 4410091286254
 Option 1 ID : 4410095076725
 Option 2 ID : 4410095076724
 Option 3 ID : 4410095076726
 Option 4 ID : 4410095076723

Q दिए गए वाक्यांश के लिए सार्थक शब्द बताएं -

7 'सम्य होने की अवस्था'

- A
n
s
1. आधुनिक
 2. समदर्शी
 3. यथार्थ
 4. सम्यता

Question ID : 4410091527916
 Option 1 ID : 4410096034859
 Option 2 ID : 4410096034861
 Option 3 ID : 4410096034862
 Option 4 ID : 4410096034860

Q दिए गए वाक्य के किस भाग में त्रुटि है?

8 त्याग सुख का सोपान और जीवन की साथर्कता है।

- A
n
s
1. त्याग सुख
 2. और जीवन की
 3. साथर्कता है।
 4. का सोपान

Question ID : 4410091618478
 Option 1 ID : 4410096392783
 Option 2 ID : 4410096392785
 Option 3 ID : 4410096392786
 Option 4 ID : 4410096392784

Q दिपावली दीपों का त्योहार है।

9 उपर्युक्त वाक्य के किस भाग में वर्तनी संबंधी अशुद्धि है ?

- A
n
s
1. दीपों का
 2. त्योहार
 3. दिपावली
 4. है।

Question ID : 4410091624820
 Option 1 ID : 4410096417808
 Option 2 ID : 4410096417809
 Option 3 ID : 4410096417807
 Option 4 ID : 4410096417810

Q नीचे दिए गए वाक्यों में से उचित पद-क्रम वाले वाक्य का चयन कीजिए।

.
1
0

A 1. ऊपर बदल मँडरा रहे है।

n

s 2. ऊपर बादल मँडरा रहे हैं।

3. उपर बदल मँडरा रहे हैं।

4. ऊपर बदल मँडरा रहे हैं।

Question ID : 4410091524612

Option 1 ID : 4410096021666

Option 2 ID : 4410096021665

Option 3 ID : 4410096021663

Option 4 ID : 4410096021664

Q रिक्त स्थान में सर्वाधिक उपयुक्त प्रेरणार्थक क्रिया के प्रयोग से वाक्य पूर्ण करें।

. मैंने उससे चिट्ठी।

1

A 1. भेजी

n

s 2. लिखवाई

3. खरीदी

4. लिखी

Question ID : 4410091251211

Option 1 ID : 4410094938027

Option 2 ID : 4410094938025

Option 3 ID : 4410094938028

Option 4 ID : 4410094938026

Q 'न पढ़ा न लिखा' किस लोकोक्ति का अर्थ है?

.
1
2

A 1. किसी का घर जले कोई तापे

n

s 2. कानी के ब्याह में सौ जोखिम

3. काला अक्षर भैंस बराबर

4. कुएँ की मिट्टी कुएँ में ही लगती है

Question ID : 4410091530613

Option 1 ID : 4410096045536

Option 2 ID : 4410096045535

Option 3 ID : 4410096045538

Option 4 ID : 4410096045537

Q दिए गए वाक्यों में से वर्तनी की दृष्टि से शुद्ध वाक्य का चयन कीजिए।

.
1
3

A 1. वह हमारे मुख्य अतिथि थे।

n

s 2. वह हमारे मुख्य अतिथ थे।

3. वह हमारे मुख्य अतिथि थे।

4. वह हमारे मुख्य अतिथि थे।

Question ID : 4410091626492

Option 1 ID : 4410096424340

Option 2 ID : 4410096424341

Option 3 ID : 4410096424342

Option 4 ID : 4410096424343

Q वाक्य में रेखांकित शब्द का सही विलोम चुनिए।

'उसके हृदय में बहुत कोमलता है।'

4

A
n
s

- ✓ 1. कठोरता
- ✗ 2. अकुशलता
- ✗ 3. अक्रमिक
- ✗ 4. अकृत्रिम

Question ID : 4410091526915
 Option 1 ID : 4410096030772
 Option 2 ID : 4410096030771
 Option 3 ID : 4410096030773
 Option 4 ID : 4410096030770

Q "अगर-मगर करना"- मुहावरे का क्या अर्थ है?

.15

A
n
s

- ✗ 1. व्यर्थ समय गँवाना
- ✗ 2. इधर की बात उधर करना
- ✗ 3. मज़ाक उड़ाना
- ✓ 4. बहाने बनाना

Question ID : 4410091618285
 Option 1 ID : 4410096392009
 Option 2 ID : 4410096392007
 Option 3 ID : 4410096392010
 Option 4 ID : 4410096392008

Adda247

Comprehension:

निम्नलिखित गद्यांश के आधार पर पूछे गए प्रश्नों के सही विकल्प का चयन करें-

नागरिक के कर्तव्य और अधिकारों की समष्टि को नागरिकता कहा जाता है। नागरिकता ऐसी विशेषता है जिसके अभाव में मनुष्य न तो समाज का आवश्यक अंग बन पाता है और न राज्य का। इसके बिना मनुष्य का जीवन एक प्रकार से या तो पशुवत् हो जाता है या महान् विरागी संन्यासी के समान, जिसका सांसारिकता से कोई सम्बन्ध नहीं होता। अतः नागरिकता हर मनुष्य को नागरिक बनाने के लिए आवश्यक है। वहीं समाज को व्यवस्थित तथा मर्यादित रखने के लिए सदाचार की आवश्यकता होती है। झूठ न बोलना, चोरी न करना, किसी को अनावश्यक ढंग से न सताना, अनुचित रीति से कामाचार न करना आदि सदाचार माने जाते हैं। झूठ, चोरी, अत्याचार आदि का त्याग इसलिए आवश्यक होता है कि इनसे समाज में अव्यवस्था उत्पन्न होती है तथा समाज का ढाँचा लड़खड़ा जाता है। समाज उन्हीं गुणों का आदर सम्मान करता है जो सामाजिक विधियों को दृढ़ बनाने में तथा बहुजन हिताय और बहुजन सुखाय कार्यों में सहायक होते हैं।

SubQuestion No : 16

Q समाज निम्नलिखित में से किस गुण का सर्वाधिक सम्मान करता है?

.
1
6

A 1. अधिकारों के प्रति जागरूकता

n
s

2. सदाचार

3. कर्तव्य विमुखता

4. वैराग्य

Question ID : 4410091617952

Option 1 ID : 4410096390679

Option 2 ID : 4410096390682

Option 3 ID : 4410096390681

Option 4 ID : 4410096390680



Comprehension:

निम्नलिखित गद्यांश के आधार पर पूछे गए प्रश्नों के सही विकल्प का चयन करें-

नागरिक के कर्तव्य और अधिकारों की समष्टि को नागरिकता कहा जाता है। नागरिकता ऐसी विशेषता है जिसके अभाव में मनुष्य न तो समाज का आवश्यक अंग बन पाता है और न राज्य का। इसके बिना मनुष्य का जीवन एक प्रकार से या तो पशुवत् हो जाता है या महान् विरागी संन्यासी के समान, जिसका सांसारिकता से कोई सम्बन्ध नहीं होता। अतः नागरिकता हर मनुष्य को नागरिक बनाने के लिए आवश्यक है। वहीं समाज को व्यवस्थित तथा मर्यादित रखने के लिए सदाचार की आवश्यकता होती है। झूठ न बोलना, चोरी न करना, किसी को अनावश्यक ढंग से न सताना, अनुचित रीति से कामाचार न करना आदि सदाचार माने जाते हैं। झूठ, चोरी, अत्याचार आदि का त्याग इसलिए आवश्यक होता है कि इनसे समाज में अव्यवस्था उत्पन्न होती है तथा समाज का ढाँचा लड़खड़ा जाता है। समाज उन्हीं गुणों का आदर सम्मान करता है जो सामाजिक विधियों को दृढ़ बनाने में तथा बहुजन हिताय और बहुजन सुखाय कार्यों में सहायक होते हैं।

SubQuestion No : 17

Q गद्यांश का सर्वाधिक उपयुक्त निष्कर्ष क्या है?

.
1
7

A 1. नागरिकता और सदाचार दोनों मिलकर व्यक्ति को समाजोपयोगी बनाते हैं

n
s

2. झूठ, चोरी, अत्याचार दुराचार के अंग हैं

3. मनुष्य का जीवन संन्यास और सांसारिकता के बीच फँसा हुआ है

✗ 4. नागरिकता केवल राज्य से जुड़ा औपचारिक संबंध है

Question ID : 4410091617953

Option 1 ID : 4410096390685

Option 2 ID : 4410096390684

Option 3 ID : 4410096390686

Option 4 ID : 4410096390683

Comprehension:

निम्नलिखित गद्यांश के आधार पर पूछे गए प्रश्नों के सही विकल्प का चयन करें-

नागरिक के कर्तव्य और अधिकारों की समष्टि को नागरिकता कहा जाता है। नागरिकता ऐसी विशेषता है जिसके अभाव में मनुष्य न तो समाज का आवश्यक अंग बन पाता है और न राज्य का। इसके बिना मनुष्य का जीवन एक प्रकार से या तो पशुवत् हो जाता है या महान् विरागी संन्यासी के समान, जिसका सांसारिकता से कोई सम्बन्ध नहीं होता। अतः नागरिकता हर मनुष्य को नागरिक बनाने के लिए आवश्यक है। वहीं समाज को व्यवस्थित तथा मर्यादित रखने के लिए सदाचार की आवश्यकता होती है। झूठ न बोलना, चोरी न करना, किसी को अनावश्यक ढंग से न सताना, अनुचित रीति से कामाचार न करना आदि सदाचार माने जाते हैं। झूठ, चोरी, अत्याचार आदि का त्याग इसलिए आवश्यक होता है कि इनसे समाज में अव्यवस्था उत्पन्न होती है तथा समाज का ढाँचा लड़खड़ा जाता है। समाज उन्हीं गुणों का आदर सम्मान करता है जो सामाजिक विधियों को दृढ़ बनाने में तथा बहुजन हिताय और बहुजन सुखाय कार्यों में सहायक होते हैं।

SubQuestion No : 18

Q नागरिकता और सदाचार की भावना के अनुरूप वास्तविक जीवन में किस स्थिति को आदर्श माना जाएगा?

.
1
8

A
n
s

- ✗ 1. व्यक्ति का केवल निजी लाभ को प्राथमिकता देना
- ✓ 2. सामाजिक व्यवस्था बनाए रखने हेतु नैतिक आचरण अपनाना
- ✗ 3. समाज से असम्बद्ध रहकर जीवन व्यतीत करना
- ✗ 4. कानून से बचते हुए अनुचित कार्य करना

Question ID : 4410091617954

Option 1 ID : 4410096390687

Option 2 ID : 4410096390689

Option 3 ID : 4410096390690

Option 4 ID : 4410096390688

Comprehension:

निम्नलिखित गद्यांश के आधार पर पूछे गए प्रश्नों के सही विकल्प का चयन करें-

नागरिक के कर्तव्य और अधिकारों की समष्टि को नागरिकता कहा जाता है। नागरिकता ऐसी विशेषता है जिसके अभाव में मनुष्य न तो समाज का आवश्यक अंग बन पाता है और न राज्य का। इसके बिना मनुष्य का जीवन एक प्रकार से या तो पशुवत् हो जाता है या महान् विरागी संन्यासी के समान, जिसका सांसारिकता से कोई सम्बन्ध नहीं होता। अतः नागरिकता हर मनुष्य को नागरिक बनाने के लिए आवश्यक है। वहीं समाज को व्यवस्थित तथा मर्यादित रखने के लिए सदाचार की आवश्यकता होती है। झूठ न बोलना, चोरी न करना, किसी को अनावश्यक ढंग से न सताना, अनुचित रीति से कामाचार न करना आदि सदाचार माने जाते हैं। झूठ, चोरी, अत्याचार आदि का त्याग इसलिए आवश्यक होता है कि इनसे समाज में अव्यवस्था उत्पन्न होती है तथा समाज का ढाँचा लड़खड़ा जाता है। समाज उन्हीं गुणों का आदर सम्मान करता है जो सामाजिक विधियों को दृढ़ बनाने में तथा बहुजन हिताय और बहुजन सुखाय कार्यों में सहायक होते हैं।

SubQuestion No : 19

Q 'कर्तव्य और अधिकारों की समष्टि'- इस वाक्य में 'समष्टि' का क्या अर्थ है?

.
1
9
A
n
s

✓ 1. सामंजस्य

✗ 2. प्रतिस्पर्धा

✗ 3. पुष्टि

✗ 4. वृद्धि

Question ID : 4410091617955

Option 1 ID : 4410096390693

Option 2 ID : 4410096390694

Option 3 ID : 4410096390692

Option 4 ID : 4410096390691

Comprehension:

निम्नलिखित गद्यांश के आधार पर पूछे गए प्रश्नों के सही विकल्प का चयन करें-

नागरिक के कर्तव्य और अधिकारों की समष्टि को नागरिकता कहा जाता है। नागरिकता ऐसी विशेषता है जिसके अभाव में मनुष्य न तो समाज का आवश्यक अंग बन पाता है और न राज्य का। इसके बिना मनुष्य का जीवन एक प्रकार से या तो पशुवत् हो जाता है या महान् विरागी संन्यासी के समान, जिसका सांसारिकता से कोई सम्बन्ध नहीं होता। अतः नागरिकता हर मनुष्य को नागरिक बनाने के लिए आवश्यक है। वहीं समाज को व्यवस्थित तथा मर्यादित रखने के लिए सदाचार की आवश्यकता होती है। झूठ न बोलना, चोरी न करना, किसी को अनावश्यक ढंग से न सताना, अनुचित रीति से कामाचार न करना आदि सदाचार माने जाते हैं। झूठ, चोरी, अत्याचार आदि का त्याग इसलिए आवश्यक होता है कि इनसे समाज में अव्यवस्था उत्पन्न होती है तथा समाज का ढाँचा लड़खड़ा जाता है। समाज उन्हीं गुणों का आदर सम्मान करता है जो सामाजिक विधियों को दृढ़ बनाने में तथा बहुजन हिताय और बहुजन सुखाय कार्यों में सहायक होते हैं।

SubQuestion No : 20

Q इस गद्यांश में 'सांसारिकता' से क्या अभिप्राय है?

.
2
0

- A
n
s
- 1. सांसारिक जीवन से विरक्ति
 - 2. संसार से मोहभंग की स्थिति
 - 3. सांसारिक कर्तव्यों और अधिकारों का निर्वहन
 - 4. संसार का उपहास उड़ाना

Question ID : 4410091617956

Option 1 ID : 4410096390697

Option 2 ID : 4410096390698

Option 3 ID : 4410096390695

Option 4 ID : 4410096390696

Section : Discipline1

Q In advanced sociological theory, the "meaning" of sociology as a science of social action, according to

. Max Weber, emphasizes:

1

- A
n
s
- 1. Functionalist equilibrium maintaining societal institutions intact
 - 2. Subjective interpretation of actors' intentions and cultural values
 - 3. Objective positivist laws predicting aggregate social phenomena
 - 4. Conflict-driven power structures perpetuating economic inequalities

Question ID : 4410091552713

Option 1 ID : 4410096133242

Option 2 ID : 4410096133241

Option 3 ID : 4410096133240

Option 4 ID : 4410096133243

Option 4 ID : 441009168657

Q Who was the chairman of the Secondary Education Commission (1952-53)?

.
2

A 1. Dr. A. Lakshmanaswami Mudaliar

n

s

2. Dr. Zakir Hussain

3. Dr. S. Radhakrishnan

4. Maulana Abul Kalam Azad

Question ID : 4410091688657

Option 1 ID : 4410096661279

Option 2 ID : 4410096661281

Option 3 ID : 4410096661278

Option 4 ID : 4410096661280

Q During adolescence, which emotional characteristic becomes more prominent?

.
3

A 1. Learning to talk and walk

n

s

2. Developing fine motor skills

3. Seeking identity

4. Playing pretend games

Question ID : 4410091683805

Option 1 ID : 4410096642134

Option 2 ID : 4410096642137

Option 3 ID : 4410096642136

Option 4 ID : 4410096642135

Q Which skill is an example of fine motor development in early childhood?

.
4

A 1. Running

n

s

2. Shouting

3. Buttoning a shirt

4. Climbing

Question ID : 4410091645402

Option 1 ID : 4410096498140

Option 2 ID : 4410096498143

Option 3 ID : 4410096498141

Option 4 ID : 4410096498142

Q In Indian society, a major feature reflecting its diversity is _____.

.
5

A 1. Shared economy

n

s

- 2. Unified lifestyle
- 3. Multiple religions
- 4. Rural mobility

Question ID : 4410091538567
 Option 1 ID : 4410096077534
 Option 2 ID : 4410096077536
 Option 3 ID : 4410096077535
 Option 4 ID : 4410096077533

Q At what stage do children typically begin to develop control over gross motor skills like running and jumping?

6

A 1. Infancy (0-2 years)

n
s

- 2. Middle childhood (ages 7-12)
- 3. Adolescence (ages 13-18)
- 4. Early childhood (ages 3-6)

Question ID : 4410091689629
 Option 1 ID : 4410096664866
 Option 2 ID : 4410096664868
 Option 3 ID : 4410096664869
 Option 4 ID : 4410096664867

Q According to the RTE Act, 2009, which of the following is the age group guaranteed free and compulsory elementary education in India?

7

A 1. 3 to 6 years

n
s

- 2. 6 to 16 years
- 3. 6 to 14 years
- 4. 14 to 18 years

Question ID : 4410091604785
 Option 1 ID : 4410096338304
 Option 2 ID : 4410096338307
 Option 3 ID : 4410096338305
 Option 4 ID : 4410096338306

Q Which of the following is an example of a gross motor skill in children?

8

A 1. Jumping

n
s

- 2. Listening
- 3. Drawing
- 4. Buttoning a shirt

Option 4 ID : 4410096370356

Q Which factor is most closely linked with the stable aspects of a child's personality?

.
9
A
n
s

- 1. Current classroom rules create stable traits.
- 2. Inherited genetic traits help develop a stable personality.
- 3. Changing peer groups determine stable traits.
- 4. Temporary moods are the main source of stability.

Question ID : 4410091600331
Option 1 ID : 4410096321010
Option 2 ID : 4410096321007
Option 3 ID : 4410096321008
Option 4 ID : 4410096321009

Q Which factor most directly shapes a child's personality during early development?

.
1
0
A
n
s

- 1. Food preference
- 2. Daily routines
- 3. Family environment
- 4. Play materials

Question ID : 4410091538534
Option 1 ID : 4410096077404
Option 2 ID : 4410096077401
Option 3 ID : 4410096077403
Option 4 ID : 4410096077402

Q Which statement most accurately distinguishes between curriculum and syllabus?

.
1
1
A
n
s

- 1. Syllabus determines educational philosophy, curriculum does not.
- 2. Syllabus and curriculum are interchangeable terms with identical meanings.
- 3. Curriculum refers only to textbooks, while syllabus includes assessments.
- 4. Curriculum includes all educational experiences, syllabus outlines topics.

Question ID : 4410091631070
Option 1 ID : 4410096442504
Option 2 ID : 4410096442503
Option 3 ID : 4410096442502
Option 4 ID : 4410096442505

Q How does the RTE Act 2009 address social disparities in elementary education in contemporary Indian society?

.
1
2
A
n
s

- 1. Raises student-teacher ratios in private setups

- 2. Targets only urban schools for expansion
- 3. Ensures fair admission and bans capitation fees
- 4. Limits entry for marginalized communities

Question ID : 4410091624597
 Option 1 ID : 4410096416921
 Option 2 ID : 4410096416920
 Option 3 ID : 4410096416919
 Option 4 ID : 4410096416922

QA municipal school in a linguistically diverse Indian city decides to implement the three-language formula . mandated by NEP 2020. Students will learn their regional language, Hindi, and English. Which underlying societal characteristic does this initiative primarily address?

3

Answers

- 1. Caste-based endogamy and purity rules
- 2. Multilingual diversity and promotion of federalism
- 3. Economic inequality and class mobility
- 4. Religious pluralism and personal laws

Question ID : 4410091682659
 Option 1 ID : 4410096637891
 Option 2 ID : 4410096637890
 Option 3 ID : 4410096637892
 Option 4 ID : 4410096637893

Q Who is responsible for implementing UEE under RTE-2009 at the local level?

.

1

4

Answers

- 1. Local authorities
- 2. Teachers
- 3. Parents
- 4. Central government

Question ID : 4410091627956
 Option 1 ID : 4410096430006
 Option 2 ID : 4410096430008
 Option 3 ID : 4410096430009

Option 4 ID : 4410096430007

Q What does national integration in education primarily aim at?

.
1
5
A
n
s

- 1. Encourage isolation of communities
- 2. Teach only science and technology
- 3. Focus only on economic growth
- 4. Promote social harmony and unity

Question ID : 4410091547354
Option 1 ID : 4410096112284
Option 2 ID : 4410096112286
Option 3 ID : 4410096112285
Option 4 ID : 4410096112283

Q According to the context, which of the following best explains the concept of personality as discussed in . personality development?

1
6
A
n
s

- 1. Personality only involves how a person behaves in social situations only.
- 2. Personality remains constant and unchangeable throughout an entire lifetime.
- 3. Personality refers to the unique and dynamic organization of characteristics within an individual.
- 4. Personality is solely determined by physical appearance and outward features.

Question ID : 4410091603956
Option 1 ID : 4410096335017
Option 2 ID : 4410096335016
Option 3 ID : 4410096335014
Option 4 ID : 4410096335015

Q A curriculum committee is reviewing social studies content to ensure students appreciate cultural diversity. Which sociological concept justifies this initiative as essential for a multicultural society?

1
7

A 1. Prioritizing rote memorization of facts

n
s

2. Eliminating group projects

3. Ensuring economic efficiency

4. Promoting tolerance and cultural sensitivity

Question ID : 4410091628900

Option 1 ID : 4410096433748

Option 2 ID : 4410096433749

Option 3 ID : 4410096433746

Option 4 ID : 4410096433747

Q In the context of socialization, which is considered a primary agent?

1
8

A 1. Family

n
s

2. Political Institutions

3. School

4. Media

Question ID : 4410091640953

Option 1 ID : 4410096480984

Option 2 ID : 4410096480986

Option 3 ID : 4410096480983

Option 4 ID : 4410096480985

Q If a child grows up in an environment with frequent parental conflict, what is a possible impact on their personality?

19

- Answers
- 1. The child will become more generous
 - 2. The child may develop insecurity
 - 3. The child will automatically be confident
 - 4. The child will always be optimistic

Question ID : 4410091685717
 Option 1 ID : 4410096649763
 Option 2 ID : 4410096649762
 Option 3 ID : 4410096649764
 Option 4 ID : 4410096649765

Q Which constitutional amendment inserted Article 21-A to provide free and compulsory education as a Fundamental Right?

20

- Answers
- 1. Eighty-sixth Amendment
 - 2. Ninety-third Amendment
 - 3. Seventy-fourth Amendment
 - 4. Forty-second Amendment

Question ID : 4410091611267
 Option 1 ID : 4410096363924
 Option 2 ID : 4410096363926
 Option 3 ID : 4410096363925
 Option 4 ID : 4410096363923

Section : Discipline2

Q Which principle of the United Nations is correctly stated here?

1

- Answers
- 1. Member states must allow the UN to interfere in their domestic affairs when required.
 -
 -
 -

4. Countries may use force if they disagree with Security Council decisions.

Question ID : 4410091572157
 Option 1 ID : 4410096209638
 Option 2 ID : 4410096209639
 Option 3 ID : 4410096209641
 Option 4 ID : 4410096209640

Q Preschool children acquire grammatical rules mainly by:

2

- Answers
- 1. Continuous adult correction
 - 2. Repeated written drills
 - 3. Studying grammar textbooks
 - 4. Using language in everyday contexts

Question ID : 4410091636711
 Option 1 ID : 4410096464728
 Option 2 ID : 4410096464725
 Option 3 ID : 4410096464726
 Option 4 ID : 4410096464727

Q Early sociologists were influenced by scientific theories of:

3

- Answers
- 1. Cyber technology
 - 2. Quantum physics
 - 3. Organic evolution
 - 4. Space exploration

Question ID : 4410091570630
 Option 1 ID : 4410096203497
 Option 2 ID : 4410096203498
 Option 3 ID : 4410096203496
 Option 4 ID : 4410096203495

Q According to Swami Vivekananda, what does 'Man Making Education' primarily aim to achieve?

4

- Answers
- 1. Preparation for commercial careers only
 - 2. Mastery in sports and physical activities
 - 3. Holistic development of an individual
 - 4. Specialization in a single subject

Question ID : 4410091619436
 Option 1 ID : 4410096396602
 Option 2 ID : 4410096396600
 Option 3 ID : 4410096396603
 Option 4 ID : 4410096396601

Q Celebrating the lives of iconic figures helps learners to:

.5

A
n
s

- 1. Imitate physical traits
- 2. Memorise historical facts
- 3. Reflect on their own identity
- 4. Neglect historical context

Question ID : 4410091639799
 Option 1 ID : 4410096476420
 Option 2 ID : 4410096476418
 Option 3 ID : 4410096476419
 Option 4 ID : 4410096476421

Q Despite its benefits, mindfulness is described as:

.6

A
n
s

- 1. Without any research evidence
- 2. Free from criticism and universally accepted
- 3. Having detractors who question its relevance
- 4. A mandatory national policy across the India

Question ID : 4410091572368
 Option 1 ID : 4410096210461
 Option 2 ID : 4410096210460
 Option 3 ID : 4410096210463
 Option 4 ID : 4410096210462

Q Which aspect best captures the dynamic nature of pedagogy as applied in classroom settings?

.7

A
n
s

- 1. It adapts instructional strategies to meet diverse learning needs
- 2. It relies mainly on standardized textbooks for content delivery
- 3. It emphasizes rote memorization over understanding
- 4. It follows a fixed sequence of topics regardless of context

Question ID : 4410091631325
 Option 1 ID : 4410096443526
 Option 2 ID : 4410096443527
 Option 3 ID : 4410096443525
 Option 4 ID : 4410096443524

Q In a group task where students correct each other's sentences, what does this interaction demonstrate?

.8

A
n
s

- 1. Students ignore language rules
- 2. Only pronunciation matters in language
- 3. Understanding and applying grammatical rules
- 4. Spelling is the only important aspect of language

Question ID : 4410091547652

Option 1 ID : 4410096113451

Option 2 ID : 4410096113453

Option 3 ID : 4410096113452

Option 4 ID : 4410096113454

Q When a child uses measurement and patterns to discover a relationship and then formulates a rule, what type of reasoning is being employed?

9

A 1. Deductive reasoning

n

s

 2. Inductive reasoning 3. Analogical reasoning 4. Abductive reasoning

Question ID : 4410091620841

Option 1 ID : 4410096402169

Option 2 ID : 4410096402172

Option 3 ID : 4410096402170

Option 4 ID : 4410096402171

Q Maxims of teaching mainly help teachers to:

.

1

0

A 1. Plan and conduct teaching

n

s

 2. Complete the syllabus 3. Control classroom discipline 4. Prepare examinations

Question ID : 4410091636242

Option 1 ID : 4410096462907

Option 2 ID : 4410096462908

Option 3 ID : 4410096462905

Option 4 ID : 4410096462906

Q A science teacher mandates an investigation where students measure local air quality factors, solely collecting data through self-designed field instruments. Which experience-based method is the teacher primarily emphasizing for learning?

1

A 1. Programmed instruction design

n

s

 2. Program-based teaching strategy 3. Programmed demonstration system 4. Heuristic/Discovery method

Question ID : 4410091550394

Option 1 ID : 4410096124039

Option 2 ID : 4410096124040

Option 3 ID : 4410096124042

Option 4 ID : 4410096124041

Q A preschool teacher asks children to describe pictures while reading a storybook. This activity mainly . applies language as a tool for:

1
2

- A n s
- 1. Behaviour control
 - 2. Memory testing
 - 3. Grammar correction
 - 4. Concept formation

Question ID : 4410091637561
Option 1 ID : 4410096467846
Option 2 ID : 4410096467849
Option 3 ID : 4410096467848
Option 4 ID : 4410096467847

Q In the context of interdisciplinary lesson planning, which sequence best ensures the logical progression . from curriculum analysis to student assessment?

1
3

- A n s
- 1. Identifying objectives, selecting strategies, aligning assessments
 - 2. Gathering resources, identifying content, designing activities
 - 3. Choosing assessments, developing content, reviewing standards
 - 4. Planning content delivery, setting objectives, selecting materials

Question ID : 4410091622921
Option 1 ID : 4410096410456
Option 2 ID : 4410096410457
Option 3 ID : 4410096410458
Option 4 ID : 4410096410459

Q A group of diploma students is encouraged to use journal writing to address interpersonal conflicts in their training program. Which journal activity best integrates self-understanding and conflict resolution skills?

4

Answers

- 1. Describing conflicts without analyzing personal role
- 2. Writing about academic goals and achievements
- 3. Listing only others' behaviors during conflicts
- 4. Reflecting on personal responses to conflicts in journal entries

Question ID : 4410091622655
Option 1 ID : 4410096409396
Option 2 ID : 4410096409399
Option 3 ID : 4410096409397
Option 4 ID : 4410096409398

Q How to differentiate primary cultural icons from other important cultural symbols?

1

5

Answers

- 1. By comparing them to photographic iconography and non-image based cultural myths
- 2. By their economic impact
- 3. By only focusing on their popularity
- 4. By their place in government policy

Question ID : 4410091611680
Option 1 ID : 4410096365576
Option 2 ID : 4410096365578
Option 3 ID : 4410096365575
Option 4 ID : 4410096365577

Q How does multilingualism impact a child's cognitive development?

.

6

A 1. It causes confusion and delays language learning

n

2. It only benefits adults, not children

3. It prevents children from learning new concepts

4. It can enhance problem-solving skills

s

Question ID : 4410091693672

Option 1 ID : 4410096680757

Option 2 ID : 4410096680758

Option 3 ID : 4410096680760

Option 4 ID : 4410096680759

Q What do the rules of a language primarily allow speakers to do?

.

1

7

A 1. Generate new and grammatically correct sentences

n

2. Memorize sentences without understanding their structure

3. Avoid all mistakes and errors in communication

4. Repeat sentences they have heard before without creating new ones

s

Question ID : 4410091623502

Option 1 ID : 4410096412592

Option 2 ID : 4410096412593

Option 3 ID : 4410096412595

Option 4 ID : 4410096412594

Adda247

Q Which of the following best describes a key benefit of peer tutoring in diverse classrooms?

.

1

8

A 1. It eliminates the need for all teaching materials and classroom resources.

n

2. It encourages cooperative learning among students with varied abilities

3. It primarily benefits only high-achieving students in academic performance.

4. It significantly increases teacher workload with constant supervision demands.

s

Question ID : 4410091637574

Option 1 ID : 4410096467891

Option 2 ID : 4410096467890

Option 3 ID : 4410096467893

Option 4 ID : 4410096467892

Q Which component organizes the sounds of a language?

.
1
9

A 1. Morphology

n

2. Semantics

3. Syntax

4. Phonology

s

Question ID : 4410091629313

Option 1 ID : 4410096435335

Option 2 ID : 4410096435337

Option 3 ID : 4410096435336

Option 4 ID : 4410096435334



Q What term describes the interactive psychological relationship where group members develop a common perception based on feelings or emotions?

.
2
0

A 1. Group dynamics

n

2. Hostel life

3. Social service

4. Project work

s

Question ID : 4410091610515

Option 1 ID : 4410096360943

Option 2 ID : 4410096360946

Option 3 ID : 4410096360944

Option 4 ID : 4410096360945

Q Which sentence is correct when the jury members have differing opinions?

.
1

A 1. The jury has made a single decision.

n
s

2. The jury is one.

3. The jury was unanimous in their decision.

4. The jury were divided in their opinion.

Question ID : 4410091572410

Option 1 ID : 4410096210607

Option 2 ID : 4410096210606

Option 3 ID : 4410096210604

Option 4 ID : 4410096210605

Q Curriculum leadership primarily focuses on managing which two core elements within the educational process?

2

A 1. Administration and facilities

n
s

2. Scheduling and logistics

3. Budgeting and finance

4. Instruction and content

Question ID : 4410091550831

Option 1 ID : 4410096125609

Option 2 ID : 4410096125610

Option 3 ID : 4410096125607

Option 4 ID : 4410096125608

Q Which of the following factor does not shape gender roles in Indian Society?

.
3

A 1. Peer group

n
s

2. Ecology

3. Family

4. School

Option 2 ID : 4410096110756
Option 3 ID : 4410096110754
Option 4 ID : 4410096110757

Q Which social factor most significantly influences the development of gender roles among children in Indian society?

- 4
- A n s
- 1. Parental expectations and modeling
 - 2. Access to digital technology
 - 3. Economic status alone
 - 4. Physical environment of the school

Question ID : 4410091641237
Option 1 ID : 4410096482102
Option 2 ID : 4410096482103
Option 3 ID : 4410096482101
Option 4 ID : 4410096482104

Q When transitioning into the role of a learning facilitator, the educator primarily encourages learners to engage in which type of meaning-making process?

- 5
- A n s
- 1. Memorization tasks
 - 2. Passive listening
 - 3. Discovery learning
 - 4. Reception learning

Question ID : 4410091558763
Option 1 ID : 4410096157444
Option 2 ID : 4410096157442
Option 3 ID : 4410096157443
Option 4 ID : 4410096157441

Q What is one key way an administrative leader supports effective teaching and learning in a school?

- 6
- A n s
- 1. Choosing textbooks for classrooms
 - 2. Disciplining students for misconduct
 - 3. Providing teacher support
 - 4. Evaluating student performance

Question ID : 4410091626218
Option 1 ID : 4410096423272
Option 2 ID : 4410096423271
Option 3 ID : 4410096423270
Option 4 ID : 4410096423269

Q Which scenario best illustrates the effective use of active and passive vocabulary in a classroom?

- 7
- A n s
- 1. Students only listen to new vocabulary in lectures

- 2. Students use new words in conversation and writing
- 3. Students memorize word lists without context
- 4. Students repeat words after the teacher silently

Question ID : 4410091638596
 Option 1 ID : 4410096472063
 Option 2 ID : 4410096472062
 Option 3 ID : 4410096472064
 Option 4 ID : 4410096472065

Q After conditioning has taken place, the salivation exhibited by a dog in response to a stimulus such as a bell, in the absence of food, is referred to as:

- Answers
- 1. Conditioned response
 - 2. Neutral response
 - 3. Unconditioned response
 - 4. Involuntary reflex

Question ID : 4410091638978
 Option 1 ID : 4410096473471
 Option 2 ID : 4410096473470
 Option 3 ID : 4410096473469
 Option 4 ID : 4410096473472

Q Which statement correctly explains the concept of volume of a solid?

- Answers
- 1. Volume is the total surface area covering the outer boundary
 - 2. Volume is the mass of a body per unit density
 - 3. Volume is the length measured along one direction only
 - 4. Volume is the amount of three-dimensional space occupied

Question ID : 4410091610634
 Option 1 ID : 4410096361419
 Option 2 ID : 4410096361422
 Option 3 ID : 4410096361421
 Option 4 ID : 4410096361420

Q In the inductive method of teaching mathematics, the teacher primarily:

- Answers
- 1. Leads students from specific examples to general principles and rules.
 - 2. Begins with abstract theories and applies them to concrete cases.
 - 3. Relies solely on standardized tests to validate mathematical concepts.
 - 4. Focuses on memorizing axioms without practical demonstrations.

Question ID : 4410091560665
 Option 1 ID : 4410096164850
 Option 2 ID : 4410096164851

Option 3 ID : 4410096164853
Option 4 ID : 4410096164852

QA teacher notices that a student who feels frustrated about their poor performance often accuses classmates of not working hard enough. Which defense mechanism is the student demonstrating?

1
1
A
n
s

- 1. Projection
- 2. Sublimation
- 3. Denial
- 4. Rationalization

Question ID : 4410091629809
Option 1 ID : 4410096437321
Option 2 ID : 4410096437323
Option 3 ID : 4410096437322
Option 4 ID : 4410096437324

QA capable Grade 8 student's performance drops significantly due to ongoing parental divorce proceedings, leading to emotional distress and low focus. According to Lewin's Equation, which intervention addresses the most immediate and influential factor affecting learning?

1
2
A
n
s

- 1. Enhance self-efficacy beliefs
- 2. Offer targeted motivation training
- 3. Counsel parents on relationship
- 4. Academic skills assessment

Question ID : 4410091550634
Option 1 ID : 4410096124960
Option 2 ID : 4410096124962
Option 3 ID : 4410096124961
Option 4 ID : 4410096124959

Q If a student wants to move a word from passive to active vocabulary, what is the most effective strategy?

1
3

- 1. Practice using the word in speech and writing

s

- 2. Read the word silently many times
- 3. Memorize the word's definition told by teachers
- 4. Hear the word in conversations between people

Question ID : 4410091695609

Option 1 ID : 4410096688433

Option 2 ID : 4410096688434

Option 3 ID : 4410096688436

Option 4 ID : 4410096688435

Q A primary teacher notices that her students can recognize words like 'astonished' and 'remarkable' in reading passages but rarely use them in their spoken or written work. Which aspect of vocabulary proficiency does this scenario best illustrate?

4

A
n
s

- 1. Active vocabulary
- 2. Expressive vocabulary
- 3. Passive vocabulary
- 4. Productive vocabulary

Question ID : 4410091683613

Option 1 ID : 4410096641378

Option 2 ID : 4410096641381

Option 3 ID : 4410096641379

Option 4 ID : 4410096641380

Adda247

Q According to Piaget's theory, which activity best supports the development of conservation of volume in elementary students?

1

5

A
n
s

- 1. Reciting the definition of unit measurement
- 2. Drawing a straight line between two points on paper
- 3. Counting the number of pencils in a pencil box
- 4. Pouring water from one container to another of different shape

Option 3 ID : 4410096483848

Option 4 ID : 4410096483847

Q In Indian society, how do traditional gender expectations typically affect educational opportunities for girls compared to boys?

16

- Answers
- 1. They discourage boys from pursuing education.
 - 2. They increase opportunities for girls only.
 - 3. They provide equal opportunities for boys and girls.
 - 4. They can restrict girls' access to higher education.

Question ID : 4410091686867

Option 1 ID : 4410096654292

Option 2 ID : 4410096654293

Option 3 ID : 4410096654291

Option 4 ID : 4410096654290

Q According to Vygotsky, the most developmentally significant form of play is:

17

- Answers
- 1. Imaginative play
 - 2. Solitary play
 - 3. Functional play
 - 4. Rule-based play

Question ID : 4410091580773

Option 1 ID : 4410096244424

Option 2 ID : 4410096244425

Option 3 ID : 4410096244422

Option 4 ID : 4410096244423

Q Series ads differ from stand-alone ads because they:

18

- Answers
- 1. Promote multiple products from different brands

- 2. Only use celebrities for endorsements
- 3. Feature a continuous or progressive narrative
- 4. Are never repeated or connected

Question ID : 4410091572437
 Option 1 ID : 4410096210688
 Option 2 ID : 4410096210690
 Option 3 ID : 4410096210691
 Option 4 ID : 4410096210689

Q What is one reason advertisers target children with television advertisements?

.
1
9
A
n
s

- 1. Children strongly influence family purchasing decisions at home
- 2. Children possess higher disposable income than many adults
- 3. Children watch television for longer hours than adults do
- 4. Children better understand advertising messages than adults

Question ID : 4410091602042
 Option 1 ID : 4410096327763
 Option 2 ID : 4410096327764
 Option 3 ID : 4410096327762
 Option 4 ID : 4410096327765

Q Which of the following best reflects the ethical responsibility of a teacher in contemporary education?

.
2
0
A
n
s

- 1. Focusing solely on academic results without considering students' individual needs
- 2. Following personal convenience and ignoring professional guidelines in teaching
- 3. Treating all learners fairly, respecting diversity, and promoting holistic development
- 4. Prioritizing administrative duties over classroom engagement and student welfare

Question ID : 4410091546577
 Option 1 ID : 4410096109187
 Option 2 ID : 4410096109188
 Option 3 ID : 4410096109189

Option 4 ID : 4410096109190

Section : Discipline4

Q The scientific approach in teaching EVS emphasizes which of the following classroom practices?

.
1

A 1. Encouraging observation and questioning

n
s

2. Ignoring students' prior knowledge

3. Limiting activities to textbook reading

4. Promoting repetitive memorization only

Question ID : 4410091641201

Option 1 ID : 4410096481957

Option 2 ID : 4410096481960

Option 3 ID : 4410096481959

Option 4 ID : 4410096481958

Q What is the main significance of Environmental Studies in Primary education?

.
2

A 1. It helps learners develop awareness and understanding of the natural and social environment

n
s

2. It encourages learners to ignore environmental issues and focus on exams

3. It replaces other subjects by concentrating solely on environmental facts

4. It focuses only on memorizing scientific terms without practical application

Question ID : 4410091547422

Option 1 ID : 4410096112550

Option 2 ID : 4410096112547

Option 3 ID : 4410096112548

Option 4 ID : 4410096112549

Q What is a primary goal of social science education in the context of social goals and imperatives?

.
3

A 1. To promote active and responsible citizenship skills

n
s

2. To focus only on memorization of factual content

3. To discourage meaningful social participation

4. To develop critical thinking about social issues

Question ID : 4410091687708
 Option 1 ID : 4410096657618
 Option 2 ID : 4410096657619
 Option 3 ID : 4410096657620
 Option 4 ID : 4410096657621

Q During a lesson, students conduct a group survey on how their families manage food spoilage and . preservation. Which two major themes does this activity connect?

4
A
n
s

- 1. Water and Shelter
- 2. Food and Shelter
- 3. Food and Things We Make and Do
- 4. Travel and Family and Friends

Question ID : 4410091608830
 Option 1 ID : 4410096354241
 Option 2 ID : 4410096354243
 Option 3 ID : 4410096354240
 Option 4 ID : 4410096354242

Q What is a primary responsibility of operational directive functions at the District Level?

5
A
n
s

- 1. Inspectorial and supervisory functions
- 2. Budget formulation
- 3. Grant-in-aid disbursement
- 4. Policy making

Question ID : 4410091624044
 Option 1 ID : 4410096414758
 Option 2 ID : 4410096414757
 Option 3 ID : 4410096414759
 Option 4 ID : 4410096414756

Q Method selection principle in lesson steps optimizes delivery considering what integrated factors?

6
A
n
s

- 1. Teacher preferences overriding student needs
- 2. Content characteristics with learner capacities
- 3. Uniform techniques ignoring contextual levels
- 4. Textbook reliance excluding aid combinations

Question ID : 4410091564495
 Option 1 ID : 4410096179558
 Option 2 ID : 4410096179557
 Option 3 ID : 4410096179559
 Option 4 ID : 4410096179560

Q What is the primary role of Social Studies textbooks?

.
7

- A n s
- 1. Promote only local knowledge base
 - 2. Focus solely on memorization skills
 - 3. Build informed and responsible citizens
 - 4. Teach only historical dates and events

Question ID : 4410091572478
 Option 1 ID : 4410096210843
 Option 2 ID : 4410096210842
 Option 3 ID : 4410096210841
 Option 4 ID : 4410096210840

Q What is a major limitation of ICT in improving English pedagogy at the primary level?

.
8

- A n s
- 1. ICT guarantees better results even with outdated teaching methods
 - 2. ICT works independently of the curriculum and learning objectives
 - 3. ICT replaces the need for teacher involvement in lesson planning
 - 4. ICT alone does not improve pedagogy without appropriate teaching strategies

Question ID : 4410091659768
 Option 1 ID : 4410096553191
 Option 2 ID : 4410096553192
 Option 3 ID : 4410096553190
 Option 4 ID : 4410096553189

Q Which material is commonly used as a low-cost teaching aid in environmental studies?

.
9

- A n s
- 1. Digitally simulated environmental models
 - 2. Locally available natural and waste materials
 - 3. Standardized multimedia learning packages
 - 4. Commercially produced laboratory apparatus

Question ID : 4410091636055
 Option 1 ID : 4410096462186
 Option 2 ID : 4410096462185
 Option 3 ID : 4410096462188
 Option 4 ID : 4410096462187

Q According to the principles of English language teaching, what should a teacher prioritize to promote effective learning?

.
10

- A n s
- 1. Focusing on translation methods exclusively.
 - 2. Emphasizing memorization of vocabulary lists alone.
 - 3. Using only teacher-centered lectures.

✓ 4. Creating interactive and student-centered activities.

Question ID : 4410091623950
 Option 1 ID : 4410096414382
 Option 2 ID : 4410096414383
 Option 3 ID : 4410096414381
 Option 4 ID : 4410096414380

Q What does globalization primarily refer to in the context of education?

.
1
1
A
n
s

- ✗ 1. Curricular standardization
- ✗ 2. Technological automation
- ✓ 3. Cross-border interconnectedness
- ✗ 4. Institutional privatization

Question ID : 4410091635556
 Option 1 ID : 4410096460245
 Option 2 ID : 4410096460246
 Option 3 ID : 4410096460244
 Option 4 ID : 4410096460243



Q Which type of language assessment focuses on evaluating student's progress during the learning process?

1
2
A
n
s

- ✗ 1. Achievement assessment
- ✓ 2. Formative assessment
- ✗ 3. Summative assessment
- ✗ 4. Placement assessment

Question ID : 4410091636899
 Option 1 ID : 4410096465431
 Option 2 ID : 4410096465429
 Option 3 ID : 4410096465430
 Option 4 ID : 4410096465432

Q Which of the following is a commonly identified micro teaching skill?

1
3

A 1. Skill of syllabus framing

n
s

2. Skill of timetable preparation

3. Skill of explaining

4. Skill of institutional administration

Question ID : 4410091584378

Option 1 ID : 4410096258755

Option 2 ID : 4410096258758

Option 3 ID : 4410096258756

Option 4 ID : 4410096258757

Q Which type of leadership focuses on providing equal opportunities to all students, teachers, and parents, regardless of their abilities?

1
4

A 1. Inclusive leadership

n
s

2. Responsive leadership

3. Network leadership

4. Responsible leadership

Question ID : 4410091579609

Option 1 ID : 4410096239740

Option 2 ID : 4410096239737

Option 3 ID : 4410096239739

Option 4 ID : 4410096239738

Q A newly appointed principal observes that many teachers rely heavily on rote memorisation and rarely use group activities. As a pedagogical leader aiming to transform classroom practices, what initial approach should the principal use to foster active learning?

5

A 1. Require weekly reports on student discipline issues only

n
s

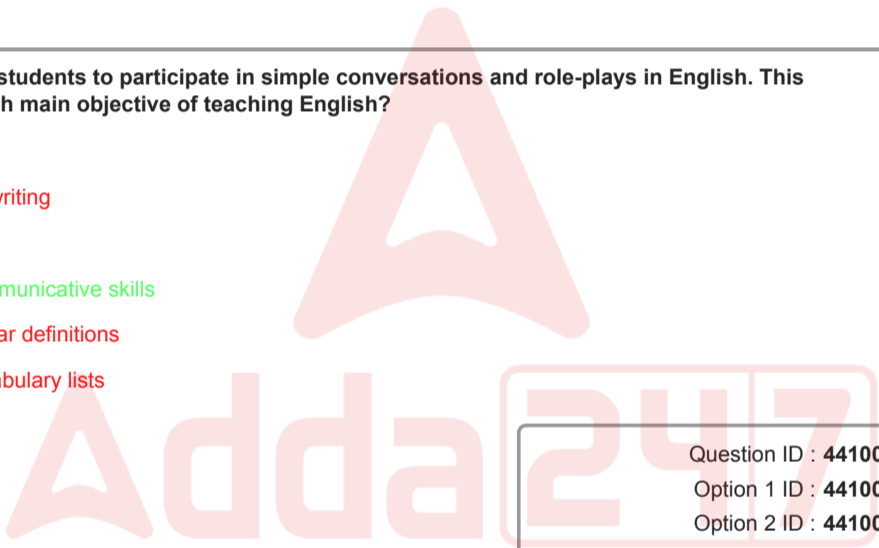
✓ 4. Facilitate collaborative planning sessions to model inquiry-based lesson design

Question ID : 4410091617129
 Option 1 ID : 4410096387422
 Option 2 ID : 4410096387421
 Option 3 ID : 4410096387419
 Option 4 ID : 4410096387420

Q A teacher encourages students to participate in simple conversations and role-plays in English. This practice supports which main objective of teaching English?

1
6
A
n
s

- ✗ 1. Improving handwriting
- ✓ 2. Developing communicative skills
- ✗ 3. Learning grammar definitions
- ✗ 4. Memorising vocabulary lists



Question ID : 4410091690172
 Option 1 ID : 4410096666970
 Option 2 ID : 4410096666971
 Option 3 ID : 4410096666972
 Option 4 ID : 4410096666973

Q How can teachers improve the reliability and validity of open-ended question assessments?

1
7
A
n
s

- ✗ 1. Simplifying the questions to reduce students' effort
- ✓ 2. Constructing clear scoring rubrics and coding categories
- ✗ 3. Focusing solely on grammatical accuracy
- ✗ 4. Allowing students to use multiple response formats

Question ID : 4410091637548
 Option 1 ID : 4410096467785
 Option 2 ID : 4410096467784
 Option 3 ID : 4410096467787
 Option 4 ID : 4410096467786

Q In planning a reading lesson, a teacher decides to begin by asking students to share personal stories related to the text's theme and introduces challenging vocabulary. This preparatory sequence is categorized under which lesson planning phase?

8

A 1. Into preparation phase.

n
s

2. Through material exploration.

3. Beyond comprehension extension.

4. Content sequencing alignment.

Question ID : 4410091550956

Option 1 ID : 4410096126088

Option 2 ID : 4410096126089

Option 3 ID : 4410096126087

Option 4 ID : 4410096126090

Q A student with visual impairment finds it challenging to understand certain social studies topics due to a lack of clear representations. Which analysis criterion should textbook authors prioritise to address such needs?

9

A 1. Focusing on lengthy text explanations without illustrations.

n
s

2. Limiting visuals to only maps and diagrams.

3. Inclusion of clear, diverse, and relevant visuals for accessibility.

4. Prioritizing complex language over visual aids.

Question ID : 4410091633286

Option 1 ID : 4410096451261

Option 2 ID : 4410096451259

Option 3 ID : 4410096451258

Option 4 ID : 4410096451260

Q Which of the following is an important principle of effective lesson planning?

.
2
0

A 1. It should include unrelated topics to make lessons more interesting

n

2. It should focus on clearly defined objectives and student-centered learning

s

3. It should be entirely rigid with no flexibility for classroom changes

4. It should depend solely on the teacher's convenience and preferences

Question ID : 4410091548014

Option 1 ID : 4410096114771

Option 2 ID : 4410096114770

Option 3 ID : 4410096114769

Option 4 ID : 4410096114772

Section : Discipline5

Q A teacher encourages students to ask questions about natural phenomena. This reflects science as:

.
1

A 1. A memorization subject

n

2. A process of inquiry and exploration

s

3. An art activity

4. A set of fixed facts

Question ID : 4410091570277

Option 1 ID : 4410096202099

Option 2 ID : 4410096202098

Option 3 ID : 4410096202100

Option 4 ID : 4410096202097

Q Which concept explains how society defines masculinity and femininity?

.
2

- Answers
- 1. Inheritance
 - 2. Physical development
 - 3. Social construction
 - 4. Natural selection

Question ID : 4410091669437
 Option 1 ID : 4410096588908
 Option 2 ID : 4410096588910
 Option 3 ID : 4410096588909
 Option 4 ID : 4410096588911

Q During classroom activities, a teacher ensures that students with disabilities are seated accessibly and given adapted materials to participate fully. This practice reflects which of the following?

- Answers
- 1. Disregard for students' special needs
 - 2. Symbolic inclusion without support
 - 3. Equitable participation for all learners
 - 4. Separation of students by ability

Question ID : 4410091693289
 Option 1 ID : 4410096679290
 Option 2 ID : 4410096679288
 Option 3 ID : 4410096679289
 Option 4 ID : 4410096679287

Q When planning instruction for children with diverse learning difficulties, which approach best supports inclusivity in the classroom?

- Answers
- 1. Exclusive resource rooms
 - 2. Differentiated instructional strategies
 - 3. Uniform teaching approaches
 - 4. Peer assessment activities

Question ID : 4410091617276
 Option 1 ID : 4410096388010
 Option 2 ID : 4410096388007
 Option 3 ID : 4410096388008
 Option 4 ID : 4410096388009

Q A language teacher is designing a lesson plan for Grade 3 students to promote foundational literacy. She includes activities for students to summarize family stories, appreciate cultural diversity in tales, and 5 chant poems with coordinated gestures. Which combination of Bloom's domains is most directly reflected in this approach?

- Answers
- 1. Cognitive and psychomotor only
 - 2. Cognitive, affective, and psychomotor
 - 3. Affective and psychomotor only
 - 4. Cognitive and affective only

Question ID : 4410091609094
 Option 1 ID : 4410096355295
 Option 2 ID : 4410096355294
 Option 3 ID : 4410096355293
 Option 4 ID : 4410096355292

Q Which of the following best defines teaching aids?

- Answers
- 1. Materials for evaluation
 - 2. Tools for entertainment
 - 3. Devices using multiple senses
 - 4. Resources for self-study

Question ID : 4410091581862
 Option 1 ID : 4410096248698
 Option 2 ID : 4410096248697
 Option 3 ID : 4410096248699
 Option 4 ID : 4410096248700

Q During a community camp, a multidisciplinary team evaluates several children using standardized tools. A child is suspected of having Specific Learning Disability (SLD). Which tool is most appropriate for confirming this identification?

- Answers
- 1. NIMHANS battery for SLD assessment
 - 2. BERA test for hearing impairment
 - 3. PRASHAST Part 2 for at-risk children
 - 4. DEGSN checklist for intellectual disability

Question ID : 4410091633979
 Option 1 ID : 4410096454010
 Option 2 ID : 4410096454011
 Option 3 ID : 4410096454012
 Option 4 ID : 4410096454013

Q A scientist observes that multiple chemical reactions in a laboratory produce heat and infers that all chemical reactions release heat. Which reasoning process does this illustrate, and why might this conclusion be limited?

- Answers
- 1. Inductive reasoning; because it generalizes from limited cases.
 - 2. Deductive reasoning; because it starts from a universal law.
 - 3. Abductive reasoning; as it seeks the best explanation for an observation.
 - 4. Hypothetico-deductive reasoning; since it tests a hypothesis against data.

Question ID : 4410091616065
 Option 1 ID : 4410096383198
 Option 2 ID : 4410096383199
 Option 3 ID : 4410096383200
 Option 4 ID : 4410096383201

Q Masculinity and femininity are considered social constructs because they:

- Answers
- 1. Remain identical across societies

ns

- 2. Vary across time and cultures
- 3. Are independent of social interaction
- 4. Are biologically universal and fixed

Question ID : 4410091589330
 Option 1 ID : 4410096277912
 Option 2 ID : 4410096277913
 Option 3 ID : 4410096277915
 Option 4 ID : 4410096277914

Q What is the primary focus of the Application level in Bloom's Taxonomy?

.
1
0

- Answers
- 1. Recognizing patterns and hidden meanings
 - 2. Using information and methods to solve new problems
 - 3. Understanding concepts and translating knowledge
 - 4. Evaluating theories and assessing their value

Question ID : 4410091638049
 Option 1 ID : 4410096469787
 Option 2 ID : 4410096469784
 Option 3 ID : 4410096469785
 Option 4 ID : 4410096469786

Q What negative outcome primarily results from patriarchal masculinity's emphasis on control, strength, and non-emotional rationality for men and boys?

.
1
1

- Answers
- 1. Enhanced physical health risks
 - 2. Reduced access to property
 - 3. Unwarranted emotional pressure
 - 4. Exclusion from political roles

Question ID : 4410091560403
 Option 1 ID : 4410096163760
 Option 2 ID : 4410096163758
 Option 3 ID : 4410096163759
 Option 4 ID : 4410096163761

Q Which term refers to the numbers used for counting objects?

.
1
2

- Answers
- 1. Prime numbers
 - 2. Rational numbers
 - 3. Whole numbers
 - 4. Natural numbers

Question ID : 4410091636802

Option 1 ID : 4410096465060
Option 2 ID : 4410096465059
Option 3 ID : 4410096465058
Option 4 ID : 4410096465057

Q Which teaching strategy is considered most appropriate for subjects like science, mathematics, grammar, and physical geography based on the complementary nature of reasoning approaches?

1
3
A
n
s

1. Inductive cum Deductive method
2. Traditional lecture method
3. Deductive only method
4. Inductive only method

Question ID : 4410091662834
Option 1 ID : 4410096564641
Option 2 ID : 4410096564644
Option 3 ID : 4410096564642
Option 4 ID : 4410096564643

Q What is one of the major issues in science education in rural India that could be resolved using science kits?

1
4
A
n
s

1. Lack of laboratory facilities
2. Excessive focus on lecture methods
3. Shortage of qualified teachers
4. Overcomplicated science textbooks

Question ID : 4410091639481
Option 1 ID : 4410096475477
Option 2 ID : 4410096475478
Option 3 ID : 4410096475480
Option 4 ID : 4410096475479

Q What is an example of gender manifesting in relationships and identity?

.
1
5

A
n
s

- 1. Assuming men are always physically stronger than women
- 2. Expecting women to never work outside the home
- 3. Men and women perceiving themselves based on assigned roles
- 4. Men and women performing the same types of jobs equally

Question ID : 4410091606663
Option 1 ID : 4410096345642
Option 2 ID : 4410096345643
Option 3 ID : 4410096345640
Option 4 ID : 4410096345641

Q According to Census 2011, what percentage of India's population is made up of Scheduled Castes?

.
1
6

A
n
s

- 1. 8.63%
- 2. 14.23%
- 3. 16.63%
- 4. 44%

Question ID : 4410091609801
Option 1 ID : 4410096358117
Option 2 ID : 4410096358118
Option 3 ID : 4410096358116
Option 4 ID : 4410096358119

Q Which statement best reflects a fundamental nature of mathematics?

.
1
7

A 1. A descriptive narrative discipline

n
s

2. Dependent on cultural opinions

3. A precise and exact science

4. A purely subjective activity

Question ID : 4410091585216

Option 1 ID : 4410096262083

Option 2 ID : 4410096262084

Option 3 ID : 4410096262082

Option 4 ID : 4410096262081

Q Which of the following statements about numbers is mathematically correct?

.
1
8

A 1. Every prime number is an even number

n
s

2. Zero is neither an even nor an odd number

3. The product of two even numbers is an even number

4. The sum of two odd numbers is an odd number

Question ID : 4410091624138

Option 1 ID : 4410096415124

Option 2 ID : 4410096415126

Option 3 ID : 4410096415125

Option 4 ID : 4410096415123

Q Which of the following options best describes the role of games in teaching mathematical concepts to children?

.
1
9

1. Games help children learn in an enjoyable, and non-threatening way

S

- 2. Games teach children mathematics only through memorization of number names
- 3. Games only entertain children and have no role in learning mathematics
- 4. Games are useful only for older children and not for primary-stage learners

Question ID : 4410091581924

Option 1 ID : 4410096248942

Option 2 ID : 4410096248943

Option 3 ID : 4410096248941

Option 4 ID : 4410096248944

Q Which of the following is an example of a real object or “realia” teaching aid in a language classroom?

.

2

0

A

n

s

- 1. Showing a video clip
- 2. Playing an audio story
- 3. Bringing fruits, vegetables, or objects to teach vocabulary
- 4. Using a PowerPoint presentation

Question ID : 4410091553681

Option 1 ID : 4410096137396

Option 2 ID : 4410096137398

Option 3 ID : 4410096137395

Option 4 ID : 4410096137397