



GOVT. OF NCT OF DELHI
Delhi Subordinate Services Selection Board
FC-18, Institutional Area, Karkardooma, Delhi – 110092.
www.dsssb.delhigovt.nic.in

Participant ID	2 [REDACTED]
Participant Name	[REDACTED]
Test Center Name	iON Digital Zone iDZ 1 Sector 62
Test Date	16/02/2026
Test Time	5:00 PM - 7:00 PM
Subject	Assistant Teacher Primary

Section : General Intelligence and Reasoning Ability



Adda247

Test Prime

ALL EXAMS, ONE SUBSCRIPTION



1,00,000+
Mock Tests



**Personalised
Report Card**



**Unlimited
Re-Attempt**



600+
Exam Covered



25,000+ Previous
Year Papers



500%
Refund



ATTEMPT FREE MOCK NOW

Q.1 If the water source is placed along M-N, as shown in the figure, which of the given options will be the water reflection of the given figure?



Ans

- 1.
- 2.
- 3.
- 4.

Question ID : 441009864929
 Option 1 ID : 4410093412817
 Option 2 ID : 4410093412816
 Option 3 ID : 4410093412819
 Option 4 ID : 4410093412818

Q.2 L is the mother of E. E is the sister of M. O is the father of N. N is the husband of M. How is L related to O?

- 1. Wife's sister
- 2. Son's wife's sister
- 3. Son's wife's mother
- 4. Wife's mother

Question ID : 4410091618979
 Option 1 ID : 4410096394791
 Option 2 ID : 4410096394789
 Option 3 ID : 4410096394788
 Option 4 ID : 4410096394790

Q.3 If + means -, - means ×, × means ÷, and ÷ means +, then what will come in place of the question mark (?) in the following equation?

$$50 - 12 \div 8 + 24 \times 3 = ?$$

- Ans
- 1. 608
 - 2. 600
 - 3. 580
 - 4. 616

Question ID : 441009348645
Option 1 ID : 4410091360901
Option 2 ID : 4410091360900
Option 3 ID : 4410091360898
Option 4 ID : 4410091360899

Q.4 Based on the English alphabetical order, three of the following four letter-clusters are alike in a certain way and thus form a group. Which letter-cluster DOES NOT belong to that group?
(Note: The odd one out is not based on the number of consonants/vowels or their position in the letter-cluster.)

- Ans
- 1. QUV
 - 2. KOP
 - 3. VZA
 - 4. INN

Question ID : 441009764838
Option 1 ID : 4410093013346
Option 2 ID : 4410093013348
Option 3 ID : 4410093013347
Option 4 ID : 4410093013345

Q.5 This question is based on the following words.
VOW APE NOT RIP

How many letters are there in the English alphabetical order between the third letter of the third word from the right and the first letter of the first word from the left?

9628

- Ans
- 1. 17
 - 2. 15
 - 3. 18
 - 4. 16

Question ID : 441009795612
Option 1 ID : 4410093136449
Option 2 ID : 4410093136448
Option 3 ID : 4410093136450
Option 4 ID : 4410093136447

Q.6 In the following triads, each group of letters is related to the subsequent one following a certain logic. Select from the given options, the one which follows the same logic.

WAIT - AWIT - TIAW
FROM - RFOM - MORF¹³¹²⁰

- Ans 1. LONG - OLNG - GNOL
 2. READ - RAED - DAER
 3. KING - IKNG - INGK
 4. SONG - OSNG - GONS

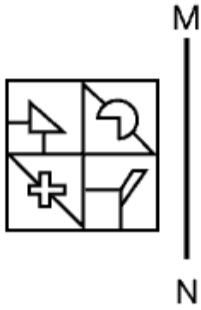
Question ID : 441009767269
Option 1 ID : 4410093023069
Option 2 ID : 4410093023070
Option 3 ID : 4410093023072
Option 4 ID : 4410093023071

Q.7 In a row of 41 people facing the north, Charu sits 16th from the right end. If Avinash sits 19th from the left end of the line, how many people sit between Charu and Avinash?

- Ans 1. 12
 2. 6
 3. 7
 4. 9

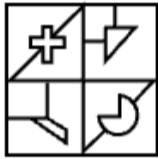
Question ID : 441009216725
Option 1 ID : 441009850940
Option 2 ID : 441009850941
Option 3 ID : 441009850942
Option 4 ID : 441009850939

Q.8 Select the correct mirror image of the given figure when the mirror is placed at MN as shown below.



Ans

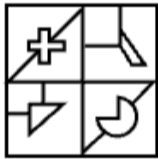
✗ 1.



✓ 2.



✗ 3.



✗ 4.



Question ID : 4410091524718
 Option 1 ID : 4410096022080
 Option 2 ID : 4410096022081
 Option 3 ID : 4410096022079
 Option 4 ID : 4410096022082

Q.9 What should come in place of the question mark (?) in the given series?
15, 21, 27, 33, 39, ?

- Ans 1. 45
 2. 42
 3. 44
 4. 43

Question ID : 441009216193
Option 1 ID : 441009848813
Option 2 ID : 441009848812
Option 3 ID : 441009848811
Option 4 ID : 441009848814

Q.10 All 38 people are standing in a row facing north. Dilip is 16th from the left end while Waseem is 9th from the right end. How many people are there between Dilip and Waseem?

- Ans 1. 10
 2. 12
 3. 11
 4. 13

Question ID : 4410091619664
Option 1 ID : 4410096397512
Option 2 ID : 4410096397514
Option 3 ID : 4410096397513
Option 4 ID : 4410096397515

Q.11 Refer to the following letter series and answer the question. (Counting has to be done from left to right)
(Left) B E V M H Q E A H S Z R W G K C I V O (Right)
How many such vowels are there each of which is immediately preceded by a consonant and also immediately followed by a vowel?

- Ans 1. Two
 2. One
 3. Four
 4. Three

Question ID : 4410091614557
Option 1 ID : 4410096377042
Option 2 ID : 4410096377041
Option 3 ID : 4410096377044
Option 4 ID : 4410096377043

Q.12 Each of L, A, Y, E, R, S and T has an exam on a different day of a week starting from Monday and ending on Sunday of the same week. Only two people have exams before E. Only one person has exam after L. Only three people have exams between E and T. Only one person has exam between A and S. R has exam immediately before A. How many people have exams between Y and A?

- Ans
- 1. Two
 - 2. One
 - 3. Four
 - 4. Three

Question ID : 4410091614386
Option 1 ID : 4410096376362
Option 2 ID : 4410096376361
Option 3 ID : 4410096376364
Option 4 ID : 4410096376363

Q.13 Which of the following letter-number clusters will replace the question mark (?) in the given series to make it logically complete?
FOS143, BK0120, XGK97, TCG74, ?

- Ans
- 1. PYC51
 - 2. PYS51
 - 3. PUC51
 - 4. LYC51

Question ID : 4410091618951
Option 1 ID : 4410096394676
Option 2 ID : 4410096394679
Option 3 ID : 4410096394677
Option 4 ID : 4410096394678

Q.14 Based on the English alphabetical order, three of the following four letter-cluster pairs are alike in a certain way and thus form a group. Which is the one that does not belong to that group?
(Note: The odd one out is not based on the number of consonants/vowels or their position in the letter cluster.)⁴⁰⁹⁷

- Ans
- 1. SU - VW
 - 2. HJ - KL
 - 3. MO - QR
 - 4. FH - IJ

Question ID : 441009790211
Option 1 ID : 4410093114843
Option 2 ID : 4410093114844
Option 3 ID : 4410093114846
Option 4 ID : 4410093114845

Q.15 11 is related to 79 following a certain logic. Following the same logic, 9 is related to 63. To which of the following is 15 related to, following the same logic?
(NOTE : Operations should be performed on the whole numbers, without breaking down the numbers into its constituent digits.
E.g. 13 – Operations on 13 such as adding /subtracting /multiplying etc. to 13 can be performed. Breaking down 13 into 1 and 3 and then performing mathematical operations on 1 and 3 is not allowed.)2003

- Ans 1. 119
 2. 111
 3. 105
 4. 114

Question ID : 441009552468
 Option 1 ID : 4410092165186
 Option 2 ID : 4410092165189
 Option 3 ID : 4410092165188
 Option 4 ID : 4410092165187

Q.16 This question is based on the five, three-digit numbers given below.
(Left) 562 587 439 455 186 (Right)
(Example- 697 – First digit = 6, second digit = 9 and third digit = 7)
NOTE - All operations to be done from left to right.

What will be the resultant if the second digit of the second highest number is added to the third digit of the lowest number?2168

- Ans 1. 11
 2. 9
 3. 13
 4. 12

Question ID : 441009788294
 Option 1 ID : 4410093107177
 Option 2 ID : 4410093107178
 Option 3 ID : 4410093107175
 Option 4 ID : 4410093107176

Q.17 If 'A' stands for '÷', 'B' stands for 'x', 'C' stands for '+' and 'D' stands for '-', what will come in place of question mark '?' in the following equation?

$$99 \text{ D } 144 \text{ A } 6 \text{ B } 3 \text{ C } 11 = ?3251$$

- Ans 1. 40
 2. 38
 3. 34
 4. 36

Question ID : 441009553716
 Option 1 ID : 4410092170178
 Option 2 ID : 4410092170179
 Option 3 ID : 4410092170180
 Option 4 ID : 4410092170181

Q.18 Six people, A, D, T, U, W and Z, are sitting in a row, facing north. Only U sits to the right of D. Only one person sits between U and Z. Only two people sit between Z and W. T sits at some place to the right of A. How many people sit to the left of A?

- Ans
- 1. Two
 - 2. Four
 - 3. Three
 - 4. One

Question ID : 441009216790
 Option 1 ID : 441009851200
 Option 2 ID : 441009851202
 Option 3 ID : 441009851201
 Option 4 ID : 441009851199

Q.19 In a certain code language, 'ROAD' is coded as '6152' and 'ROAM' is coded as '2951'. What is the code for 'M' in that language?

- Ans
- 1. 2
 - 2. 9
 - 3. 1
 - 4. 6

Question ID : 4410091619041
 Option 1 ID : 4410096395039
 Option 2 ID : 4410096395036
 Option 3 ID : 4410096395038
 Option 4 ID : 4410096395037

Q.20 Refer to the following letter series and answer the question(Counting has to be done from left to right)
 (Left) D D Z B R E M W L K S G L Q V A U Q R (Right)
 How many such consonants are there each of which is immediately preceded by a consonant and also immediately followed by a vowel?

- Ans
- 1. Two
 - 2. Four
 - 3. One
 - 4. Three

Question ID : 4410091614558
 Option 1 ID : 4410096377046
 Option 2 ID : 4410096377048
 Option 3 ID : 4410096377045
 Option 4 ID : 4410096377047

Q.1 Akhil Sheoran won a bronze medal in which shooting event at the ISSF World Cup Final 2024?

- Ans
- 1. Men's 10 m air rifle
 - 2. Men's skeet shooting
 - 3. Men's 25 m rapid fire pistol
 - 4. Men's 50 m rifle 3 positions

Question ID : 441009257819
Option 1 ID : 4410091005112
Option 2 ID : 4410091005115
Option 3 ID : 4410091005114
Option 4 ID : 4410091005113

Q.2 The champions of IPL 2025 title was won by which of the following teams?

- Ans
- 1. Kolkata Knight Riders
 - 2. Sunrisers Hyderabad
 - 3. Royal Challengers Bengaluru
 - 4. Chennai Super Kings

Question ID : 4410091546892
Option 1 ID : 4410096110438
Option 2 ID : 4410096110439
Option 3 ID : 4410096110436
Option 4 ID : 4410096110437

Q.3 What type of unemployment predominantly affects the agricultural sector in India, especially during off-seasons?

- Ans
- 1. Structural unemployment
 - 2. Seasonal unemployment
 - 3. Cyclical unemployment
 - 4. Frictional unemployment

Question ID : 441009628853
Option 1 ID : 4410092469564
Option 2 ID : 4410092469567
Option 3 ID : 4410092469566
Option 4 ID : 4410092469565

Q.4 Who, from among the following, received the Sangeet Natak Akademi Award 2020 for Chhau?

- Ans
- 1. Bhushan Lakandri
 - 2. Sruti Bandopadhyay
 - 3. Trilochan Mohanta
 - 4. Prema Ramamurthy

Question ID : 441009607637
Option 1 ID : 4410092385668
Option 2 ID : 4410092385665
Option 3 ID : 4410092385667
Option 4 ID : 4410092385666

Q.5 Which of the following legislations shifted the governance of India from the East India Company to the British Crown by ending the dual administrative setup?

- Ans
- 1. Charter Act, 1833
 - 2. Regulating Act, 1773
 - 3. Pitt's India Act, 1784
 - 4. Government of India Act, 1858

Question ID : 4410091551143
Option 1 ID : 4410096126822
Option 2 ID : 4410096126821
Option 3 ID : 4410096126820
Option 4 ID : 4410096126819

Q.6 Which of the following tombs in Delhi provided refuge to Bahadur Shah Zafar and the Mughal royal family in 1857 after the British took control of Delhi?

- Ans
- 1. Sikandar Lodi's Tomb
 - 2. Safdarjung Tomb
 - 3. Humayun's Tomb
 - 4. Ghiyas-ud-din Tughlaq's Tomb

Question ID : 4410091551151
Option 1 ID : 4410096126853
Option 2 ID : 4410096126852
Option 3 ID : 4410096126851
Option 4 ID : 4410096126854

Q.7 According to which Amendment of the Indian Constitution, the total number of ministers, including the Prime Minister, cannot exceed 15% of the Lok Sabha's strength?

- Ans
- 1. 91st Amendment
 - 2. 42nd Amendment
 - 3. 44th Amendment
 - 4. 73rd Amendment

Question ID : 4410091270501
Option 1 ID : 4410095013924
Option 2 ID : 4410095013921
Option 3 ID : 4410095013922
Option 4 ID : 4410095013923

Q.8 Money Bills can be introduced only in _____.

- Ans
- 1. Rajya Sabha
 - 2. Lok Sabha
 - 3. Joint Sitting
 - 4. either House

Question ID : 441009316714
Option 1 ID : 4410091233330
Option 2 ID : 4410091233332
Option 3 ID : 4410091233333
Option 4 ID : 4410091233331

Q.9 Where was the 112th International Labour Conference organised?

- Ans
- 1. Milan
 - 2. Berne
 - 3. Geneva
 - 4. Paris

Question ID : 441009217390
Option 1 ID : 441009853516
Option 2 ID : 441009853518
Option 3 ID : 441009853519
Option 4 ID : 441009853517

Q.10 Who among the following was/were NOT one of the three formidable players in southern Indian politics in the 1720s?

- Ans
- 1. The Nizam of Hyderabad
 - 2. The Arcot Nawab
 - 3. The Marathas
 - 4. The Mysore rulers

Question ID : 441009205163
Option 1 ID : 441009806874
Option 2 ID : 441009806875
Option 3 ID : 441009806873
Option 4 ID : 441009806876

Q.11 Who among the following is a Padma Bhushan awardee associated with the Kuchipudi dance?

- Ans
- 1. Rukmini Devi Arundale
 - 2. Shovana Narayanan
 - 3. Sitara Devi
 - 4. Vempati Chinna Satyam

Question ID : 441009607565
Option 1 ID : 4410092385377
Option 2 ID : 4410092385379
Option 3 ID : 4410092385378
Option 4 ID : 4410092385380

Q.12 According to Article 371F of the Indian Constitution, how many members does the Legislative Assembly of Sikkim have?

- Ans
- 1. 25
 - 2. 32
 - 3. 45
 - 4. 65

Question ID : 441009199829
Option 1 ID : 441009786607
Option 2 ID : 441009786608
Option 3 ID : 441009786609
Option 4 ID : 441009786610

Q.13 In November 2025 in Qatar, the FIFA U-17 World Cup 2025 was won by which nation?

- Ans
- 1. Brazil
 - 2. France
 - 3. Portugal
 - 4. Germany

Question ID : 4410091563033
Option 1 ID : 4410096173697
Option 2 ID : 4410096173696
Option 3 ID : 4410096173698
Option 4 ID : 4410096173695

Q.14 Which of the following requires energy in the form of ATP?

- Ans
- 1. Active transport
 - 2. Passive transport
 - 3. Facilitated transport
 - 4. Simple diffusion

Question ID : 441009646694
Option 1 ID : 4410092540891
Option 2 ID : 4410092540892
Option 3 ID : 4410092540894
Option 4 ID : 4410092540893

Q.15 Which of the following religions is associated with Gangaramaya Temple of Sri Lanka?

- Ans
- 1. Islam
 - 2. Hinduism
 - 3. Buddhism
 - 4. Sikhism

Question ID : 441009638409
Option 1 ID : 4410092507779
Option 2 ID : 4410092507782
Option 3 ID : 4410092507780
Option 4 ID : 4410092507781

Q.16 Who received the 2025 World Leader for Peace and Security Award by the Boston Global Forum (BGF) and the AI World Society (AIWS)?

- Ans
- 1. Yogi Dinesh Chander
 - 2. Jaggi Vasudev
 - 3. Baba Ramdev
 - 4. Sri Sri Ravi Shankar

Question ID : 4410091564731
Option 1 ID : 4410096180498
Option 2 ID : 4410096180495
Option 3 ID : 4410096180497
Option 4 ID : 4410096180496

Q.17 In which year was 'National Social Assistance Scheme' launched to provide financial assistance to the elderly, widows and person with disabilities?

- Ans
- 1. 1995
 - 2. 1980
 - 3. 2015
 - 4. 2010

Question ID : 441009637840
Option 1 ID : 4410092505504
Option 2 ID : 4410092505503
Option 3 ID : 4410092505506
Option 4 ID : 4410092505505

Q.18 Which law of thermodynamics states that heat cannot spontaneously flow from a colder object to a hotter object without external intervention?

- Ans
- 1. First
 - 2. Second
 - 3. Third
 - 4. Zeroth

Question ID : 441009509288
Option 1 ID : 4410091992311
Option 2 ID : 4410091992312
Option 3 ID : 4410091992313
Option 4 ID : 4410091992310

Q.19 Which of the following is NOT a benefit of LPG reforms?

- Ans
- 1. Increased foreign investment
 - 2. Access to modern technology
 - 3. Reduction in competition
 - 4. Growth in GDP

Question ID : 44100989639
Option 1 ID : 441009356733
Option 2 ID : 441009356736
Option 3 ID : 441009356735
Option 4 ID : 441009356734

Q.20 Which leader initiated the Garibi Hatao (Eradicate Poverty) Initiative in the 1970s to combat poverty?

- Ans
- 1. Indira Gandhi
 - 2. Rajiv Gandhi
 - 3. Atal Bihari Vajpayee
 - 4. Jawaharlal Nehru

Question ID : 441009637392
Option 1 ID : 4410092503714
Option 2 ID : 4410092503712
Option 3 ID : 4410092503711
Option 4 ID : 4410092503713

Section : Arithmetical and Numerical Ability

Q.1 What sum (in ₹) will earn a simple interest of ₹1680 in 3 years at 8% per year rate of interest?¹³⁴³

- Ans
- 1. 14000
 - 2. 403.2
 - 3. 7000
 - 4. 3500

Question ID : 441009852625
Option 1 ID : 4410093363474
Option 2 ID : 4410093363475
Option 3 ID : 4410093363472
Option 4 ID : 4410093363473

Q.2 The length, breadth, and height of a cuboid are in the ratio 4 : 9 : 12. The length, breadth, and height of the cuboid are increased by 50%, 100%, and 100%, respectively. Then, the increase in the volume of the cuboid will be:

- Ans
- 1. 6 times
 - 2. 8 times
 - 3. 2 times
 - 4. 5 times

Question ID : 44100944862
Option 1 ID : 441009178664
Option 2 ID : 441009178667
Option 3 ID : 441009178665
Option 4 ID : 441009178666

Q.3 Akshay invested ₹57,500 in a bank. In two years how much compound interest (in ₹) will he get, considering annual compounding, if the rate of interest for the first year was 4% per annum and the rate for the second year was 1% per annum more than the first year?

- Ans
- 1. 5,090
 - 2. 4,940
 - 3. 5,540
 - 4. 5,290

Question ID : 441009573222
Option 1 ID : 4410092248009
Option 2 ID : 4410092248010
Option 3 ID : 4410092248011
Option 4 ID : 4410092248008

Q.4 The LCM of the numbers 5, 8.3 and 0.19 is:

- Ans
- 1. 15770
 - 2. 6308
 - 3. 7885
 - 4. 4731

Question ID : 441009525622
Option 1 ID : 4410092057908
Option 2 ID : 4410092057909
Option 3 ID : 4410092057907
Option 4 ID : 4410092057910

Q.5 A started a software business by investing ₹21000. After three months, B joined him with a capital of ₹32000. After 4 years, they earned a profit of ₹40800. What was A's share (in ₹, rounded off to the nearest integer) in the profit?

- Ans
- 1. 16800
 - 2. 16746
 - 3. 16732
 - 4. 16704

Question ID : 441009898438
 Option 1 ID : 4410093547822
 Option 2 ID : 4410093547824
 Option 3 ID : 4410093547825
 Option 4 ID : 4410093547823

Q.6 Find the square root of $\frac{(0.127)(0.13)}{(1.27)(2.197)}$.

- Ans
- 1. $\frac{4}{13}$
 - 2. $\frac{2}{13}$
 - 3. $\frac{3}{13}$
 - 4. $\frac{1}{13}$

Question ID : 441009209538
 Option 1 ID : 441009823438
 Option 2 ID : 441009823436
 Option 3 ID : 441009823437
 Option 4 ID : 441009823435

Q.7 A missile consisting of a conical head mounted on a cylindrical base. The density of the cylindrical base. The density of the base is 100 kg

The length of the cylindrical base is 10 metres, and the total length

- Ans
- 1. 5 metres
 - 2. 4 metres
 - 3. 4.5 metres
 - 4. 5.5 metres

Question ID : 441009621341
 Option 1 ID : 4410092439496
 Option 2 ID : 4410092439497
 Option 3 ID : 4410092439498
 Option 4 ID : 4410092439499

Q.8 The average price of three items of furniture is ₹5,245. If their prices are in the ratio 3 : 5 : 7, the price of the cheapest item (in ₹) is:

- Ans
- 1. 5,245
 - 2. 3,147
 - 3. 1,049
 - 4. 7,343

Question ID : 441009209433
Option 1 ID : 441009823017
Option 2 ID : 441009823015
Option 3 ID : 441009823016
Option 4 ID : 441009823018

Q.9 A tap fills a cistern in 7 hours. Another tap empties the full tank in 56 hours. How long (in hours) will it take to fill half of the tank, if the tank is empty initially and both the taps are open together?³⁹³⁶

- Ans
- 1. 5
 - 2. 9
 - 3. 8
 - 4. 4

Question ID : 441009897249
Option 1 ID : 4410093543068
Option 2 ID : 4410093543069
Option 3 ID : 4410093543067
Option 4 ID : 4410093543066

Q.10 In a test, B got 54 marks while A got 75 marks, out of 105 maximum marks. What approximate percentage of B's marks was A's marks?⁵⁶⁷⁵

- Ans
- 1. 72%
 - 2. 71.43%
 - 3. 138.89%
 - 4. 105%

Question ID : 441009856957
Option 1 ID : 4410093380801
Option 2 ID : 4410093380803
Option 3 ID : 4410093380800
Option 4 ID : 4410093380802

Q.11 Three numbers are in the ratio 7 : 9 : 12. If the difference between the smallest and the largest numbers is 10, what is the sum of the numbers?

- Ans
- 1. 61
 - 2. 42
 - 3. 56
 - 4. 72

Question ID : 44100951994
Option 1 ID : 441009207106
Option 2 ID : 441009207104
Option 3 ID : 441009207105
Option 4 ID : 441009207107

Q.12 A can do a piece of work in 10 days. B can do the same work in 12 days. How many days they will take to complete one-eighth of the work, if they work together?

- Ans
- 1. $\frac{12}{17}$ days
 - 2. $\frac{15}{22}$ days
 - 3. $\frac{11}{14}$ days
 - 4. $\frac{14}{19}$ days

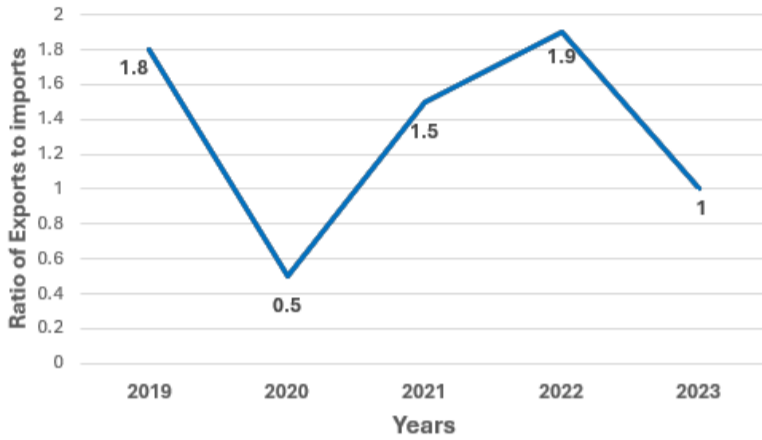
Question ID : 4410091401605
Option 1 ID : 4410095535732
Option 2 ID : 4410095535734
Option 3 ID : 4410095535731
Option 4 ID : 4410095535733

Q.13 An Uber cab covers a distance of 544 km in 16 hours. What is its speed (in km/hr)?

- Ans
- 1. 34
 - 2. 30
 - 3. 28
 - 4. 37

Question ID : 441009209075
Option 1 ID : 441009821583
Option 2 ID : 441009821586
Option 3 ID : 441009821584
Option 4 ID : 441009821585

Q.14 The following line graph gives the information about the ratio of exports to imports of a company over the years 2019 to 2023. In how many of the given years were the exports more than the imports for that company?



- Ans
- 1.4
 - 2.3
 - 3.2
 - 4.1

Question ID : 441009364134
 Option 1 ID : 4410091422789
 Option 2 ID : 4410091422786
 Option 3 ID : 4410091422788
 Option 4 ID : 4410091422787

Q.15 In a sale, 45% of the goods are sold at a profit of 32%. Of the goods left, 20% are sold at a profit of 46%, and the rest are sold at a loss of 24%. If the overall profit is x%, find the value of x.

- Ans
- 1.15
 - 2.8.9
 - 3.7
 - 4.14.5

Question ID : 441009915085
 Option 1 ID : 4410093614592
 Option 2 ID : 4410093614594
 Option 3 ID : 4410093614593
 Option 4 ID : 4410093614591

Q.16 Two cyclists, X and Y, start from the same point on a circular track of length 504 metres but move in opposite directions. Their initial speeds are 9 m/s and 27 m/s, respectively. Each time they meet, X's speed triples, and Y's speed reduces to one-third of its previous value. After how much time will they meet for the third time?

- Ans
- 1. 32 sec
 - 2. 28 sec
 - 3. 22 sec
 - 4. 34 sec

Question ID : 44100952166
Option 1 ID : 441009207785
Option 2 ID : 441009207784
Option 3 ID : 441009207783
Option 4 ID : 441009207786

Q.17 A shopkeeper offers a scheme "Buy 5 items and get 3 items free". What is the effective discount percentage given to the customer?

- Ans
- 1. 60%
 - 2. 33.33%
 - 3. 30%
 - 4. 37.5%

Question ID : 4410091640097
Option 1 ID : 4410096477591
Option 2 ID : 4410096477590
Option 3 ID : 4410096477592
Option 4 ID : 4410096477593

Q.18 The average of 8 numbers is 45. If each number is increased by 4, what will the new average be?

- Ans
- 1. 8
 - 2. 49
 - 3. 45
 - 4. 53

Question ID : 441009581567
Option 1 ID : 4410092281397
Option 2 ID : 4410092281394
Option 3 ID : 4410092281395
Option 4 ID : 4410092281396

Q.19 Radha made a semicircular design in her notebook of radius 5 cm:

- Ans
- 1. $(5\pi + 8)$ cm
 - 2. $(5\pi + 14)$ cm
 - 3. $(5\pi + 12)$ cm
 - 4. $(5\pi + 10)$ cm

Question ID : 4410098386
Option 1 ID : 44100933256
Option 2 ID : 44100933259
Option 3 ID : 44100933258
Option 4 ID : 44100933257

Q.20 A merchant bought 40 kg of rice for ₹1,200. He sold the entire quantity for ₹1,440. What is his percentage profit?

- Ans
- 1. 10%
 - 2. 20%
 - 3. 18%
 - 4. 15%

Question ID : 4410091546366
Option 1 ID : 4410096108335
Option 2 ID : 4410096108338
Option 3 ID : 4410096108337
Option 4 ID : 4410096108336

Section : English Language and Comprehension

Q.1 Select the option that is the most appropriate antonym of the underlined word in the given sentence.

Her countenance remained impassive despite the shocking news.

- Ans
- 1. fervent
 - 2. skeptical
 - 3. callous
 - 4. gloomy

Question ID : 4410091639696
Option 1 ID : 4410096476116
Option 2 ID : 4410096476117
Option 3 ID : 4410096476115
Option 4 ID : 4410096476114

Q.2 Select the most appropriate option that can substitute the underlined words in the given sentence.

A theory states that mankind has descended from animals living in trees animals.

- Ans
- 1. terrestrial
 - 2. aquatic
 - 3. arboreal
 - 4. herbivores

Question ID : 4410091543729
Option 1 ID : 4410096097975
Option 2 ID : 4410096097974
Option 3 ID : 4410096097977
Option 4 ID : 4410096097976

Q.3 Complete the sentence with the appropriate word.

I will call you _____ I reach home.

- Ans
- 1. unless
 - 2. whereas
 - 3. although
 - 4. when

Question ID : 4410091553010
Option 1 ID : 4410096134357
Option 2 ID : 4410096134359
Option 3 ID : 4410096134358
Option 4 ID : 4410096134356

Q.4 Choose the correct spelling to replace the misspelt word in the given sentence.

The professor emphasized the need for accomodation facilities for visiting scholars.

- Ans
- 1. accomodation → accomadation
 - 2. accomodation → accommodation
 - 3. accomodation → accomidation
 - 4. accomodation → accommodation

Question ID : 4410091324687
Option 1 ID : 4410095230239
Option 2 ID : 4410095230237
Option 3 ID : 4410095230240
Option 4 ID : 4410095230238

Q.5 Choose the synonym of the highlighted word from the options given below.

The principal showed great forbearance while dealing with the students' repeated mistakes.

- Ans
- 1. excitement
 - 2. tolerance
 - 3. impatience
 - 4. anger

Question ID : 4410091527519
Option 1 ID : 4410096033230
Option 2 ID : 4410096033228
Option 3 ID : 4410096033227
Option 4 ID : 4410096033229

Q.6 Select the option that can be used as a one-word substitute for the given group of words.

Smelling or tasting very strong and sharp

- Ans
- 1. Pungent
 - 2. Zesty
 - 3. Savory
 - 4. Robust

Question ID : 441009352163
Option 1 ID : 4410091375003
Option 2 ID : 4410091375005
Option 3 ID : 4410091375002
Option 4 ID : 4410091375004

Q.7 Choose the option that best completes the sentence using an appropriate adjective.
Despite the _____ conditions, the rescue team continued their operation without hesitation.

- Ans
- 1. tedious
 - 2. luxurious
 - 3. spacious
 - 4. hazardous

Question ID : 4410091122853
Option 1 ID : 4410094426974
Option 2 ID : 4410094426975
Option 3 ID : 4410094426976
Option 4 ID : 4410094426973

Q.8 Fill in the blanks with the most appropriate option.

During our visit to the museum, we saw ___ Mona Lisa in reality and later attended a lecture on how light was used in ___ same painting to guide the viewer's gaze.

- Ans
- 1. the, a
 - 2. a, the
 - 3. a, a
 - 4. the, the

Question ID : 4410091122066
Option 1 ID : 4410094423828
Option 2 ID : 4410094423827
Option 3 ID : 4410094423826
Option 4 ID : 4410094423825

Q.9 Fill in the blanks with the correct option.

He bought ___ umbrella and ___ raincoat before the trip.

- Ans
- 1. a, an
 - 2. a, a
 - 3. an, an
 - 4. an, a

Question ID : 4410091126894
Option 1 ID : 4410094443135
Option 2 ID : 4410094443132
Option 3 ID : 4410094443133
Option 4 ID : 4410094443134

Q.10 Parts of a sentence are given below in jumbled order. Arrange the parts in the correct order to form a meaningful sentence.

- A. the best defence against allergies
- B. possible and promptly take anti-allergy
- C. is to avoid the triggers whenever
- D. medications after exposure

- Ans
- 1. DBAC
 - 2. BADC
 - 3. CDBA
 - 4. ACBD

Question ID : 4410091534563
Option 1 ID : 4410096061502
Option 2 ID : 4410096061499
Option 3 ID : 4410096061501
Option 4 ID : 4410096061500

Q.11 Complete the sentence with appropriate options in the blanks.

He worked hard _____ he could pass the exam _____ secure a scholarship.

- Ans
- 1. although / or
 - 2. unless / so
 - 3. because / but
 - 4. so that / and

Question ID : 4410091300411
Option 1 ID : 4410095133974
Option 2 ID : 4410095133975
Option 3 ID : 4410095133972
Option 4 ID : 4410095133973

Q.12 In the following question, a statement has been given with highlighted text. You are required to replace the text with the correct idiom given in the options.

The king being a weak person, never went to the battlefield.

- Ans
- 1. Man of letters
 - 2. Dare devil
 - 3. Last straw
 - 4. Man of straw

Question ID : 441009409179
Option 1 ID : 4410091602109
Option 2 ID : 4410091602106
Option 3 ID : 4410091602108
Option 4 ID : 4410091602107

Q.13 In the question given below, a part of the sentence has been underlined. Choose the option which best replaces the underlined text with the correct idiom.

Despite the impressive presentation, the proposal failed to produce any real impact.

- Ans
- 1. fell flat
 - 2. went down in flames
 - 3. bit the dust
 - 4. hit the sack

Question ID : 4410091699587
Option 1 ID : 4410096703915
Option 2 ID : 4410096703916
Option 3 ID : 4410096703917
Option 4 ID : 4410096703914

Q.14 Parts of a sentence are given below. While the first and the last part (S1) and (S6) are in correct order, the parts in between are jumbled up. Arrange the parts in the correct order to form a meaningful sentence.

- S1. The establishment of
- P. promoting sustainable and greener
- Q. well- constructed pedestrian pavements is not
- R. but also contributes to
- S. only a matter of safety
- S6. modes of transportation.

- Ans
- 1. SRPQ
 - 2. PQRS
 - 3. QSRP
 - 4. RSQP

Question ID : 4410091534529
Option 1 ID : 4410096061356
Option 2 ID : 4410096061358
Option 3 ID : 4410096061357
Option 4 ID : 4410096061355

Q.15 Select the wrongly spelt word.

- Ans
- 1. Maintainance
 - 2. Surprise
 - 3. Argument
 - 4. Calendar

Question ID : 4410091041364
Option 1 ID : 4410094114591
Option 2 ID : 4410094114593
Option 3 ID : 4410094114590
Option 4 ID : 4410094114592

Comprehension:

Read the passage carefully and answer the following questions.

Some people believe that insect behaviour shows signs of intelligence. However, when we look more closely, we see that most insect actions are ingrained, automatic, and hard to change. The female SpheX wasp is a good example that challenges the idea of insect intelligence and shows how their behaviour is more like a fixed routine than true thinking. The wasp follows a specific pattern: she paralyses a grasshopper, places it near her burrow, checks the burrow, and then pulls the grasshopper inside by its antennae. This may seem smart and careful, but experiments show that her actions are not flexible. Darwin found that if the grasshopper's antennae were removed, the wasp could not finish her task – even though she could have used the legs instead. This shows she cannot adjust her behaviour when something small changes.

Another naturalist, Fabre, tried to disrupt the wasp's routine by moving the grasshopper slightly while she was inside the burrow. Each time, the wasp brought it back and started the inspection all over again. He repeated this forty times, and the wasp reacted the same way every time. This kind of repetitive behaviour suggests that she is not thinking but simply following a set pattern triggered by certain signals. Some might say that the wasp's behaviour is efficient and helps her survive, so it must be intelligent. But being efficient is not the same as being adaptable.

SubQuestion No : 16

Q.16 Select the most appropriate antonym for the word 'disrupted'.

- Ans**
- 1. advantage
 - 2. organized
 - 3. abundant
 - 4. perception

Question ID : 4410091301419
Option 1 ID : 4410095137979
Option 2 ID : 4410095137977
Option 3 ID : 4410095137976
Option 4 ID : 4410095137978

Comprehension:

Read the passage carefully and answer the following questions.

Some people believe that insect behaviour shows signs of intelligence. However, when we look more closely, we see that most insect actions are ingrained, automatic, and hard to change. The female SpheX wasp is a good example that challenges the idea of insect intelligence and shows how their behaviour is more like a fixed routine than true thinking. The wasp follows a specific pattern: she paralyses a grasshopper, places it near her burrow, checks the burrow, and then pulls the grasshopper inside by its antennae. This may seem smart and careful, but experiments show that her actions are not flexible. Darwin found that if the grasshopper's antennae were removed, the wasp could not finish her task – even though she could have used the legs instead. This shows she cannot adjust her behaviour when something small changes.

Another naturalist, Fabre, tried to disrupt the wasp's routine by moving the grasshopper slightly while she was inside the burrow. Each time, the wasp brought it back and started the inspection all over again. He repeated this forty times, and the wasp reacted the same way every time. This kind of repetitive behaviour suggests that she is not thinking but simply following a set pattern triggered by certain signals. Some might say that the wasp's behaviour is efficient and helps her survive, so it must be intelligent. But being efficient is not the same as being adaptable.

SubQuestion No : 17

Q.17 Which of the following inferences can be drawn from the passage?

- Ans**
- 1. Wasps have an excellent ability to catch prey even when a routine is disrupted.
 - 2. Wasps have good memory. They remember their prey very well.
 - 3. The behaviour of the wasp is mechanistic and not adaptive.
 - 4. Wasps are very intelligent and good at problem solving.

Question ID : 4410091301420
Option 1 ID : 4410095137981
Option 2 ID : 4410095137980
Option 3 ID : 4410095137982
Option 4 ID : 4410095137983

Comprehension:

Read the passage carefully and answer the following questions.

Some people believe that insect behaviour shows signs of intelligence. However, when we look more closely, we see that most insect actions are ingrained, automatic, and hard to change. The female Sphex wasp is a good example that challenges the idea of insect intelligence and shows how their behaviour is more like a fixed routine than true thinking. The wasp follows a specific pattern: she paralyses a grasshopper, places it near her burrow, checks the burrow, and then pulls the grasshopper inside by its antennae. This may seem smart and careful, but experiments show that her actions are not flexible. Darwin found that if the grasshopper's antennae were removed, the wasp could not finish her task – even though she could have used the legs instead. This shows she cannot adjust her behaviour when something small changes.

Another naturalist, Fabre, tried to disrupt the wasp's routine by moving the grasshopper slightly while she was inside the burrow. Each time, the wasp brought it back and started the inspection all over again. He repeated this forty times, and the wasp reacted the same way every time. This kind of repetitive behaviour suggests that she is not thinking but simply following a set pattern triggered by certain signals. Some might say that the wasp's behaviour is efficient and helps her survive, so it must be intelligent. But being efficient is not the same as being adaptable.

SubQuestion No : 18

Q.18 What is the structure of the passage?

- Ans**
- 1. argumentative
 - 2. descriptive
 - 3. cause and effect
 - 4. chronological

Question ID : 4410091301421
Option 1 ID : 4410095137987
Option 2 ID : 4410095137986
Option 3 ID : 4410095137985
Option 4 ID : 4410095137984

Comprehension:

Read the passage carefully and answer the following questions.

Some people believe that insect behaviour shows signs of intelligence. However, when we look more closely, we see that most insect actions are ingrained, automatic, and hard to change. The female Sphex wasp is a good example that challenges the idea of insect intelligence and shows how their behaviour is more like a fixed routine than true thinking. The wasp follows a specific pattern: she paralyses a grasshopper, places it near her burrow, checks the burrow, and then pulls the grasshopper inside by its antennae. This may seem smart and careful, but experiments show that her actions are not flexible. Darwin found that if the grasshopper's antennae were removed, the wasp could not finish her task – even though she could have used the legs instead. This shows she cannot adjust her behaviour when something small changes.

Another naturalist, Fabre, tried to disrupt the wasp's routine by moving the grasshopper slightly while she was inside the burrow. Each time, the wasp brought it back and started the inspection all over again. He repeated this forty times, and the wasp reacted the same way every time. This kind of repetitive behaviour suggests that she is not thinking but simply following a set pattern triggered by certain signals. Some might say that the wasp's behaviour is efficient and helps her survive, so it must be intelligent. But being efficient is not the same as being adaptable.

SubQuestion No : 19

Q.19 Which of the following real-world scenarios uses the word 'ingrained' most appropriately?

- Ans**
- 1. He ingrained the information given by his HR on the flashcard.
 - 2. The music of '500 miles' by Hedy West is ingrained in my memory.
 - 3. The coffin was ingrained with sturdy nails.
 - 4. Pablo Picasso ingrained his painting with vibrant and bold colours.

Question ID : 4410091301422
Option 1 ID : 4410095137989
Option 2 ID : 4410095137988
Option 3 ID : 4410095137991
Option 4 ID : 4410095137990

Comprehension:

Read the passage carefully and answer the following questions.

Some people believe that insect behaviour shows signs of intelligence. However, when we look more closely, we see that most insect actions are ingrained, automatic, and hard to change. The female Sphex wasp is a good example that challenges the idea of insect intelligence and shows how their behaviour is more like a fixed routine than true thinking. The wasp follows a specific pattern: she paralyses a grasshopper, places it near her burrow, checks the burrow, and then pulls the grasshopper inside by its antennae. This may seem smart and careful, but experiments show that her actions are not flexible. Darwin found that if the grasshopper's antennae were removed, the wasp could not finish her task – even though she could have used the legs instead. This shows she cannot adjust her behaviour when something small changes.

Another naturalist, Fabre, tried to disrupt the wasp's routine by moving the grasshopper slightly while she was inside the burrow. Each time, the wasp brought it back and started the inspection all over again. He repeated this forty times, and the wasp reacted the same way every time. This kind of repetitive behaviour suggests that she is not thinking but simply following a set pattern triggered by certain signals. Some might say that the wasp's behaviour is efficient and helps her survive, so it must be intelligent. But being efficient is not the same as being adaptable.

SubQuestion No : 20

Q.20 Identify the main theme of the passage.

- Ans
- 1. ambition and war
 - 2. problem solving and intelligence
 - 3. loss and grief
 - 4. love and happiness

Question ID : 4410091301423

Option 1 ID : 4410095137992

Option 2 ID : 4410095137994

Option 3 ID : 4410095137995

Option 4 ID : 4410095137993

Section : Hindi Language and Comprehension

Q.1 उपयुक्त कारक चिह्न का चयन कर दिए गए वाक्य को पूर्ण कीजिए।
गोपाल ब्राह्मणदक्षिणा देता है।

- Ans
- 1. को
 - 2. ने
 - 3. हे
 - 4. से

Question ID : 4410091304940

Option 1 ID : 4410095151809

Option 2 ID : 4410095151811

Option 3 ID : 4410095151812

Option 4 ID : 4410095151810

Q.2 दिए गए वाक्य में स्थानवाचक क्रिया-विशेषण का चयन करके रिक्त स्थान की पूर्ति करें -
ऐतिहासिक दस्तावेजों को संग्रहालयों की संदूकों में ----- सावधानीपूर्वक संरक्षित किया जाता है।

- Ans 1. अन्दर
 2. हमेशा
 3. बहुधा
 4. अधिक

Question ID : 4410091547153
 Option 1 ID : 4410096111487
 Option 2 ID : 4410096111485
 Option 3 ID : 4410096111488
 Option 4 ID : 4410096111486

Q.3 'सूरज को दीपक दिखाना' मुहावरे का सही अर्थ क्या है ?

- Ans 1. संसाधनों का उपयोग उपयुक्त स्थान पर करना
 2. प्रयास सही दिशा में करना
 3. जरूरतमंद को सही मदद देना
 4. ज्ञानवान को ज्ञान देना

Question ID : 4410091547184
 Option 1 ID : 4410096111605
 Option 2 ID : 4410096111608
 Option 3 ID : 4410096111607
 Option 4 ID : 4410096111606

Q.4 निम्न में से वाक्य में रेखांकित शब्द का विलोम शब्द कौन-सा है ?
'महाप्रभु शिव मेरे आराध्य हैं।'

- Ans 1. दुजायगी
 2. असाध्य
 3. दुराराध्य
 4. दुसाध्य

Question ID : 4410091626561
 Option 1 ID : 4410096424619
 Option 2 ID : 4410096424618
 Option 3 ID : 4410096424617
 Option 4 ID : 4410096424616

Q.5 दिए गए वाक्य के रिक्त स्थान में स्वादबोधक विशेषण शब्द का प्रयोग करें -
'टोकरी में अंगूर हैं।'

- Ans 1. बड़ा
 2. खट्टे
 3. छोटा
 4. मोटा

Question ID : 4410091528266
Option 1 ID : 4410096036261
Option 2 ID : 4410096036262
Option 3 ID : 4410096036260
Option 4 ID : 4410096036259

Q.6 रिक्त स्थान की पूर्ति उपयुक्त सार्वनामिक विशेषण से करें-
आप नगर में रहते हैं?

- Ans 1. दिल्ली
 2. स्वच्छ
 3. एक
 4. किस

Question ID : 4410091251248
Option 1 ID : 4410094938175
Option 2 ID : 4410094938174
Option 3 ID : 4410094938173
Option 4 ID : 4410094938176

Q.7 रिक्त स्थान में उपयुक्त सकर्मक क्रिया के प्रयोग से वाक्य पूर्ण करें।
ड्राइवर ने गाड़ी।

- Ans 1. लिखा ली
 2. दौड़ी
 3. चढ़ाई
 4. रोक दी

Question ID : 4410091251206
Option 1 ID : 4410094938008
Option 2 ID : 4410094938005
Option 3 ID : 4410094938007
Option 4 ID : 4410094938006

Q.8 निम्न में से 'अंधे की लकड़ी' मुहावरे का सही अर्थ बताइए -

- Ans 1. एक ही सहारा
 2. धोखा देना
 3. विवेकभ्रष्ट होना
 4. चाल चलना

Question ID : 4410091526237
 Option 1 ID : 4410096028073
 Option 2 ID : 4410096028071
 Option 3 ID : 4410096028070
 Option 4 ID : 4410096028072

Q.9 निम्नलिखित में से किस मुहावरे का अर्थ संगत नहीं है?

- Ans 1. अपनी खिचड़ी अलग पकाना - अलग-थलग रहना
 2. अंधे के हाथ बटेर लगना - बिना प्रयास भारी चीज पा लेना
 3. उड़ती चिड़िया पहचानना - मन की बात ताड़ जाना
 4. मक्खी नाक पर न बैठने देना - कल्पना करके प्रसन्न होना

Question ID : 4410091626131
 Option 1 ID : 4410096422927
 Option 2 ID : 4410096422925
 Option 3 ID : 4410096422926
 Option 4 ID : 4410096422928

Q.10 जो पुरुष लोहे की तरह बलिष्ठ हो- वाक्यांश के लिए सार्थक शब्द क्या होगा?

- Ans 1. लोहित
 2. रुक्मपुरुष
 3. महाबली
 4. लौहपुरुष

Question ID : 4410091327818
 Option 1 ID : 4410095242804
 Option 2 ID : 4410095242801
 Option 3 ID : 4410095242803
 Option 4 ID : 4410095242802

Q.11 निम्न में से 'अंधों में काना राजा' लोकोक्ति का सही अर्थ कौन सा है ?

- Ans
- 1. मुख धनवान
 - 2. गुण के विरुद्ध नाम होना
 - 3. मूर्खों में कुछ पढ़ा-लिखा व्यक्ति
 - 4. अकेला आदमी लाचार होता है

Question ID : 4410091526398
Option 1 ID : 4410096028713
Option 2 ID : 4410096028712
Option 3 ID : 4410096028711
Option 4 ID : 4410096028710

Q.12 'दक्षिण मार्ग का अनुयायी' वाक्यांश के लिए सार्थक शब्द होगा -

- Ans
- 1. दक्षिणमार्गी
 - 2. दक्षिणायन
 - 3. दक्खिन
 - 4. दकियानुसी

Question ID : 4410091304614
Option 1 ID : 4410095150573
Option 2 ID : 4410095150572
Option 3 ID : 4410095150574
Option 4 ID : 4410095150575

Q.13 मैं उसे इस काबिल नहीं समझता ।
उपर्युक्त रेखांकित शब्द का विलोम क्या होगा ?

- Ans
- 1. नाकाबिल
 - 2. अधीर
 - 3. यतीम
 - 4. नादान

Question ID : 4410091624876
Option 1 ID : 4410096418031
Option 2 ID : 4410096418034
Option 3 ID : 4410096418032
Option 4 ID : 4410096418033

Q.14 "ढपोर शंख" - मुहावरे का क्या अर्थ है?

- Ans 1. केवल बड़ी-बड़ी बातें करना
 2. सिफ़ारिश करवाना
 3. विख्यात होना
 4. कंगाल होना

Question ID : 4410091618333
Option 1 ID : 4410096392196
Option 2 ID : 4410096392197
Option 3 ID : 4410096392198
Option 4 ID : 4410096392195

Q.15 दिये गए वाक्य के रेखांकित शब्द का विलोम शब्द चुनिए -

साहित्यिक आलोचना में लेखक की विविध कृतियों का समग्र संकलन उसकी रचनात्मक प्रवृत्तियों को समझने में मदद करता है।

- Ans 1. समाकलन
 2. आकलन
 3. विचलन
 4. व्यवकलन

Question ID : 4410091547306
Option 1 ID : 4410096112093
Option 2 ID : 4410096112092
Option 3 ID : 4410096112094
Option 4 ID : 4410096112091

Comprehension:

दिए गए गद्यांश को ध्यानपूर्वक पढ़कर पूछे गए प्रश्नों के सर्वाधिक उपयुक्त उत्तर वाले विकल्प को चुनकर उत्तर दीजिए-

वे उपन्यास जिनमें किसी विशेष अंचल का चित्रण कथानक के द्वारा किया जाता है, आंचलिक उपन्यास के अंतर्गत आते हैं। अंचल का शाब्दिक अर्थ है - जनपद या क्षेत्र। जिन उपन्यासों में किसी विशिष्ट क्षेत्र के जनजीवन का समग्र बिम्बात्मक चित्रण होता है, उन्हें आंचलिक उपन्यास कहा जाता है। इन उपन्यासों का मूल उद्देश्य उस क्षेत्र विशेष की सभ्यता, संस्कृति, रहन-सहन, रूढ़ियाँ, सामाजिक परम्पराएँ, लोकजीवन त्योहार, पर्व, भाषा-बोली, भूगोल, राजनीतिक चेतना एवं आर्थिक कठिनाइयों का चित्रण करना होता है। आंचलिक उपन्यासकारों में फणीश्वरनाथ रेणु का प्रमुख स्थान है। उनका मैला आँचल (1954 ई.) नामक उपन्यास हिन्दी के आंचलिक उपन्यासों में मील का पत्थर है। इसके कथानक में 1942 ई. से लेकर गांधीजी के निधन तक की परिस्थितियों का चित्रण किया गया है और कथानक की आधार भूमि बिहार के पूर्णिया जिले के एक गाँव मेरीगंज को बनाया गया है। यह पिछड़ा गाँव है जहाँ हर वर्ग के लोग रहते हैं जिनमें पारस्परिक संघर्ष चलता रहता है। इस गाँव की प्रगति में बाधक तत्व है - रूढ़िगत संस्कार, छुआछुत की भावना, आपसी संघर्ष, अंधविश्वास। जनता अब अपने उन दुश्मनों को पहचानने लगी है जो आजादी मिलते ही खद्दर पहनकर देशभक्ति और जनसेवा का ढोंग करते हुए अपने स्वार्थ की पूर्ति करते हैं

SubQuestion No : 16

Q.16 फणीश्वरनाथ रेणु किस प्रकार के उपन्यासकार हैं ?

- Ans
- 1. समकालीन
 - 2. आंचलिक
 - 3. मार्क्सवादी
 - 4. मनोवैज्ञानिक

Question ID : 4410091626172

Option 1 ID : 4410096423087

Option 2 ID : 4410096423088

Option 3 ID : 4410096423086

Option 4 ID : 4410096423085

Comprehension:

दिए गए गद्यांश को ध्यानपूर्वक पढ़कर पूछे गए प्रश्नों के सर्वाधिक उपयुक्त उत्तर वाले विकल्प को चुनकर उत्तर दीजिए-

वे उपन्यास जिनमें किसी विशेष अंचल का चित्रण कथानक के द्वारा किया जाता है, आंचलिक उपन्यास के अंतर्गत आते हैं। अंचल का शाब्दिक अर्थ है - जनपद या क्षेत्र। जिन उपन्यासों में किसी विशिष्ट क्षेत्र के जनजीवन का समग्र बिम्बात्मक चित्रण होता है, उन्हें आंचलिक उपन्यास कहा जाता है। इन उपन्यासों का मूल उद्देश्य उस क्षेत्र विशेष की सभ्यता, संस्कृति, रहन-सहन, रूढ़ियाँ, सामाजिक परम्पराएँ, लोकजीवन त्योहार, पर्व, भाषा-बोली, भूगोल, राजनीतिक चेतना एवं आर्थिक कठिनाइयों का चित्रण करना होता है। आंचलिक उपन्यासकारों में फणीश्वरनाथ रेणु का प्रमुख स्थान है। उनका मैला आँचल (1954 ई.) नामक उपन्यास हिन्दी के आंचलिक उपन्यासों में मील का पत्थर है। इसके कथानक में 1942 ई. से लेकर गांधीजी के निधन तक की परिस्थितियों का चित्रण किया गया है और कथानक की आधार भूमि बिहार के पूर्णिया जिले के एक गाँव मेरीगंज को बनाया गया है। यह पिछड़ा गाँव है जहाँ हर वर्ग के लोग रहते हैं जिनमें पारस्परिक संघर्ष चलता रहता है। इस गाँव की प्रगति में बाधक तत्व है - रूढ़िगत संस्कार, छुआछुत की भावना, आपसी संघर्ष, अंधविश्वास। जनता अब अपने उन दुश्मनों को पहचानने लगी है जो आजादी मिलते ही खद्दर पहनकर देशभक्ति और जनसेवा का ढोंग करते हुए अपने स्वार्थ की पूर्ति करते हैं

SubQuestion No : 17

Q.17 मैला आँचल में किस क्षेत्र का चित्रण है ?

- Ans
- 1. उत्तर प्रदेश
 - 2. बंगाल
 - 3. उड़ीसा
 - 4. बिहार के पूर्णिया जिले के मेरीगंज का

Question ID : 4410091626173

Option 1 ID : 4410096423089

Option 2 ID : 4410096423091

Option 3 ID : 4410096423090

Option 4 ID : 4410096423092

Comprehension:

दिए गए गद्यांश को ध्यानपूर्वक पढ़कर पूछे गए प्रश्नों के सर्वाधिक उपयुक्त उत्तर वाले विकल्प को चुनकर उत्तर दीजिए-

वे उपन्यास जिनमें किसी विशेष अंचल का चित्रण कथानक के द्वारा किया जाता है, आंचलिक उपन्यास के अंतर्गत आते हैं। अंचल का शाब्दिक अर्थ है - जनपद या क्षेत्र। जिन उपन्यासों में किसी विशिष्ट क्षेत्र के जनजीवन का समग्र बिम्बात्मक चित्रण होता है, उन्हें आंचलिक उपन्यास कहा जाता है। इन उपन्यासों का मूल उद्देश्य उस क्षेत्र विशेष की सभ्यता, संस्कृति, रहन-सहन, रूढ़ियाँ, सामाजिक परम्पराएँ, लोकजीवन त्योहार, पर्व, भाषा-बोली, भूगोल, राजनीतिक चेतना एवं आर्थिक कठिनाइयों का चित्रण करना होता है। आंचलिक उपन्यासकारों में फणीश्वरनाथ रेणु का प्रमुख स्थान है। उनका मैला आंचल (1954 ई.) नामक उपन्यास हिन्दी के आंचलिक उपन्यासों में मील का पत्थर है। इसके कथानक में 1942 ई. से लेकर गांधीजी के निधन तक की परिस्थितियों का चित्रण किया गया है और कथानक की आधार भूमि बिहार के पूर्णिया जिले के एक गाँव मेरीगंज को बनाया गया है। यह पिछड़ा गाँव है जहाँ हर वर्ग के लोग रहते हैं जिनमें पारस्परिक संघर्ष चलता रहता है। इस गाँव की प्रगति में बाधक तत्व है - -रूढ़िगत संस्कार, छुआछुत की भावना, आपसी संघर्ष, अंधविश्वास। जनता अब अपने उन दुश्मनों को पहचानने लगी है जो आजादी मिलते ही खद्दर पहनकर देशभक्ति और जनसेवा का ढोंग करते हुए अपने स्वार्थ की पूर्ति करते हैं

SubQuestion No : 18

Q.18 मैला आंचल का प्रकाशन कब हुआ था ?

- Ans
- 1. 1980 ई.
 - 2. 1954 ई.
 - 3. 1900 ई.
 - 4. 1930 ई.

Question ID : 4410091626174

Option 1 ID : 4410096423096

Option 2 ID : 4410096423095

Option 3 ID : 4410096423093

Option 4 ID : 4410096423094

Comprehension:

दिए गए गद्यांश को ध्यानपूर्वक पढ़कर पूछे गए प्रश्नों के सर्वाधिक उपयुक्त उत्तर वाले विकल्प को चुनकर उत्तर दीजिए-

वे उपन्यास जिनमें किसी विशेष अंचल का चित्रण कथानक के द्वारा किया जाता है, आंचलिक उपन्यास के अंतर्गत आते हैं। अंचल का शाब्दिक अर्थ है - जनपद या क्षेत्र। जिन उपन्यासों में किसी विशिष्ट क्षेत्र के जनजीवन का समग्र बिम्बात्मक चित्रण होता है, उन्हें आंचलिक उपन्यास कहा जाता है। इन उपन्यासों का मूल उद्देश्य उस क्षेत्र विशेष की सभ्यता, संस्कृति, रहन-सहन, रूढ़ियाँ, सामाजिक परम्पराएँ, लोकजीवन त्योहार, पर्व, भाषा-बोली, भूगोल, राजनीतिक चेतना एवं आर्थिक कठिनाइयों का चित्रण करना होता है। आंचलिक उपन्यासकारों में फणीश्वरनाथ रेणु का प्रमुख स्थान है। उनका मैला आंचल (1954 ई.) नामक उपन्यास हिन्दी के आंचलिक उपन्यासों में मील का पत्थर है। इसके कथानक में 1942 ई. से लेकर गांधीजी के निधन तक की परिस्थितियों का चित्रण किया गया है और कथानक की आधार भूमि बिहार के पूर्णिया जिले के एक गाँव मेरीगंज को बनाया गया है। यह पिछड़ा गाँव है जहाँ हर वर्ग के लोग रहते हैं जिनमें पारस्परिक संघर्ष चलता रहता है। इस गाँव की प्रगति में बाधक तत्व है - -रूढ़िगत संस्कार, छुआछुत की भावना, आपसी संघर्ष, अंधविश्वास। जनता अब अपने उन दुश्मनों को पहचानने लगी है जो आजादी मिलते ही खद्दर पहनकर देशभक्ति और जनसेवा का ढोंग करते हुए अपने स्वार्थ की पूर्ति करते हैं

SubQuestion No : 19

Q.19 मैला आंचल की मूल चेतना क्या है ?

- Ans
- 1. धर्म तथा आडंबर
 - 2. राजनीति
 - 3. खद्दरधारी नेताओं की स्वार्थी मनोवृत्ति
 - 4. ग्रामीण क्षेत्र

Question ID : 4410091626175

Option 1 ID : 4410096423099

Option 2 ID : 4410096423098

Option 3 ID : 4410096423100

Option 4 ID : 4410096423097

Comprehension:

दिए गए गद्यांश को ध्यानपूर्वक पढ़कर पूछे गए प्रश्नों के सर्वाधिक उपयुक्त उत्तर वाले विकल्प को चुनकर उत्तर दीजिए-

वे उपन्यास जिनमें किसी विशेष अंचल का चित्रण कथानक के द्वारा किया जाता है, आंचलिक उपन्यास के अंतर्गत आते हैं। अंचल का शाब्दिक अर्थ है - जनपद या क्षेत्र। जिन उपन्यासों में किसी विशिष्ट क्षेत्र के जनजीवन का समग्र बिम्बात्मक चित्रण होता है, उन्हें आंचलिक उपन्यास कहा जाता है। इन उपन्यासों का मूल उद्देश्य उस क्षेत्र विशेष की सभ्यता, संस्कृति, रहन-सहन, रूढ़ियाँ, सामाजिक परम्पराएँ, लोकजीवन त्योहार, पर्व, भाषा-बोली, भूगोल, राजनीतिक चेतना एवं आर्थिक कठिनाइयों का चित्रण करना होता है। आंचलिक उपन्यासकारों में फणीश्वरनाथ रेणु का प्रमुख स्थान है। उनका मैला आँचल (1954 ई.) नामक उपन्यास हिन्दी के आंचलिक उपन्यासों में मील का पत्थर है। इसके कथानक में 1942 ई. से लेकर गांधीजी के निधन तक की परिस्थितियों का चित्रण किया गया है और कथानक की आधार भूमि बिहार के पूर्णिया जिले के एक गाँव मेरीगंज को बनाया गया है। यह पिछड़ा गाँव है जहाँ हर वर्ग के लोग रहते हैं जिनमें पारस्परिक संघर्ष चलता रहता है। इस गाँव की प्रगति में बाधक तत्व है - रूढ़िगत संस्कार, छुआछुत की भावना, आपसी संघर्ष, अंधविश्वास। जनता अब अपने उन दुश्मनों को पहचानने लगी है जो आजादी मिलते ही खद्दर पहनकर देशभक्ति और जनसेवा का ढोंग करते हुए अपने स्वार्थ की पूर्ति करते हैं

SubQuestion No : 20

Q.20 प्रस्तुत अवतरण का उचित शीर्षक क्या होगा ?

- Ans
- 1. प्रगतिवाद
 - 2. फणीश्वरनाथ रेणु
 - 3. आंचलिक उपन्यास और मैला आंचल
 - 4. उपन्यास

Question ID : 4410091626176

Option 1 ID : 4410096423104

Option 2 ID : 4410096423102

Option 3 ID : 4410096423101

Option 4 ID : 4410096423103

Section : Discipline1

Q.1 In a multilingual classroom, what is a likely challenge faced by teachers?

- Ans
- 1. Increased participation
 - 2. Communication barriers
 - 3. Uniform learning pace
 - 4. Identical cultural values

Question ID : 4410091640181

Option 1 ID : 4410096477922

Option 2 ID : 4410096477923

Option 3 ID : 4410096477924

Option 4 ID : 4410096477925

Q.2 Which stage of moral development is characterized by a child's focus on obeying rules to avoid punishment?

- Ans
- 1. Post-conventional stage
 - 2. Autonomous stage
 - 3. Pre-conventional stage
 - 4. Conventional stage

Question ID : 4410091600404

Option 1 ID : 4410096321297

Option 2 ID : 4410096321298

Option 3 ID : 4410096321295

Option 4 ID : 4410096321296

Q.3 Why is understanding the concept of syllabus important for teachers?

- Ans
- 1. It helps plan and organize teaching content
 - 2. It sets national policies
 - 3. It determines classroom seating
 - 4. It restricts student participation

Question ID : 4410091640959

Option 1 ID : 4410096481008

Option 2 ID : 4410096481009

Option 3 ID : 4410096481007

Option 4 ID : 4410096481010

Q.4 What is the gold standard method for assessing nutritional status in children?

- Ans
- 1. Blood tests
 - 2. Diet recall
 - 3. Physical activity
 - 4. Anthropometry

Question ID : 4410091611186

Option 1 ID : 4410096363599

Option 2 ID : 4410096363602

Option 3 ID : 4410096363601

Option 4 ID : 4410096363600

Q.5 A teacher is asked to adapt the curriculum for a class with students from diverse linguistic backgrounds and different learning styles. She adjusts teaching methods and allows students to choose project topics that interest them. Which approach to curriculum development is the teacher primarily using?

- Ans
- 1. Learner-centered approach
 - 2. Integration approach
 - 3. Subject-centered approach
 - 4. Society-centered approach

Question ID : 4410091604767
Option 1 ID : 4410096338234
Option 2 ID : 4410096338235
Option 3 ID : 4410096338232
Option 4 ID : 4410096338233

Q.6 In which of the following Piaget's stages of cognitive development, young children can use mental symbols but their thinking is not logical?

- Ans
- 1. Sensorimotor stage
 - 2. Concrete-operational stage
 - 3. Pre-operational stage
 - 4. Formal operational stage

Question ID : 4410091544022
Option 1 ID : 4410096099187
Option 2 ID : 4410096099189
Option 3 ID : 4410096099188
Option 4 ID : 4410096099190

Q.7 Which of the following best illustrates how poverty and gender discrimination can intersect to create barriers for women in India?

- Ans
- 1. Growth of technology industries in metropolitan cities
 - 2. Limited access to education for girls from low-income families
 - 3. High rates of male unemployment in urban areas
 - 4. Increased political participation among men

Question ID : 4410091624532
Option 1 ID : 4410096416665
Option 2 ID : 4410096416663
Option 3 ID : 4410096416664
Option 4 ID : 4410096416666

Q.8 A student is faced with a situation where breaking a rule would help someone in need, but goes ahead because she believes in universal moral principles. Which stage of moral development is this?

- Ans
- 1. Post-conventional stage
 - 2. Concrete operational stage
 - 3. Conventional stage
 - 4. Pre-conventional stage

Question ID : 4410091607583
Option 1 ID : 4410096349300
Option 2 ID : 4410096349303
Option 3 ID : 4410096349302
Option 4 ID : 4410096349301

Q.9 What does the principle of individual differences in growth and development suggest?

- Ans
- 1. All children develop identically
 - 2. Development happens only in childhood
 - 3. Children develop at their own unique rates
 - 4. Growth stops after puberty

Question ID : 4410091689378
Option 1 ID : 4410096663912
Option 2 ID : 4410096663913
Option 3 ID : 4410096663910
Option 4 ID : 4410096663911

Q.10 Feminization of poverty primarily refers to:

- Ans
- 1. Equal poverty distribution between men and women across all global regions
 - 2. Disproportionate representation of women among the world's poor populations
 - 3. Complete eradication of poverty through women's exclusive economic programs
 - 4. Concentration of poverty mainly in urban male-dominated industrial areas

Question ID : 4410091550840
Option 1 ID : 4410096125639
Option 2 ID : 4410096125640
Option 3 ID : 4410096125642
Option 4 ID : 4410096125641

Q.11 Growth and development usually follow a pattern from head to toe. What is this principle called?

- Ans
- 1. Differentiation
 - 2. Cephalocaudal
 - 3. Proximodistal
 - 4. Sequential

Question ID : 4410091546701
Option 1 ID : 4410096109686
Option 2 ID : 4410096109684
Option 3 ID : 4410096109683
Option 4 ID : 4410096109685

Q.12 Which of the following options best describes a core objective of peace education?

- Ans
- 1. Focusing mainly on national issues while avoiding international perspectives.
 - 2. Promoting competition among individuals to achieve higher social status.
 - 3. Encouraging rational decision-making, and appreciation of diverse cultures.
 - 4. Limiting discussions to avoid conflicts and maintain strict discipline.

Question ID : 4410091572183
Option 1 ID : 4410096209737
Option 2 ID : 4410096209734
Option 3 ID : 4410096209735
Option 4 ID : 4410096209736

Q.13 Which of the following is a key social milestone in middle childhood (6–12 years)?

- Ans
- 1. Formation of identity
 - 2. Stranger anxiety
 - 3. Parallel play
 - 4. Developing a sense of industry and teamwork

Question ID : 4410091525100
Option 1 ID : 4410096023592
Option 2 ID : 4410096023590
Option 3 ID : 4410096023593
Option 4 ID : 4410096023591

Q.14 James Beane has classified the curriculum in four categories, which of the following is not a part of those?

- Ans
- 1. Curriculum as intended learning outcomes
 - 2. Curriculum as an assessment
 - 3. Curriculum as a product
 - 4. Curriculum as a programme

Question ID : 4410091544142
Option 1 ID : 4410096099670
Option 2 ID : 4410096099669
Option 3 ID : 4410096099667
Option 4 ID : 4410096099668

Q.15 What is the outward-from-center motor development pattern called?

- Ans
- 1. Sequential process
 - 2. Universal pattern
 - 3. Cephalocaudal
 - 4. Proximodistal

Question ID : 4410091556596
Option 1 ID : 4410096148961
Option 2 ID : 4410096148960
Option 3 ID : 4410096148959
Option 4 ID : 4410096148958

Q.16 The sexual division of labour refers to:

- Ans
- 1. Restricting women only to paid jobs
 - 2. Equal sharing of household and outdoor work
 - 3. Women doing most household work while men work outside
 - 4. Men doing all domestic chores and duties

Question ID : 4410091570565
Option 1 ID : 4410096203233
Option 2 ID : 4410096203231
Option 3 ID : 4410096203232
Option 4 ID : 4410096203234

Q.17 The Secondary Education Commission, Mudaliar Commission, recommended a secondary education duration of:

- Ans
- 1. Four years prioritizing classical languages over modern vocational skill training
 - 2. Six years divided into lower and higher stages with diversified curriculum options
 - 3. Seven years focused exclusively on university entrance preparation ignoring electives
 - 4. Three years emphasizing only theoretical subjects and rote memorization exams

Question ID : 4410091550900

Option 1 ID : 4410096125877

Option 2 ID : 4410096125876

Option 3 ID : 4410096125878

Option 4 ID : 4410096125875

Q.18 What is the main focus of education in its narrow sense?

- Ans
- 1. A conscious and deliberate process to modify behaviour in desirable and socially approved channels
 - 2. A continuous and dynamic process of child development
 - 3. An act of drawing out innate abilities
 - 4. An experience that has a formative effect on personality

Question ID : 4410091611551

Option 1 ID : 4410096365060

Option 2 ID : 4410096365061

Option 3 ID : 4410096365059

Option 4 ID : 4410096365062

Q.19 Across India, a pressing issue that affects opportunities for many women is:

- Ans
- 1. Limited access to skill development
 - 2. Gender bias
 - 3. Urban migration pressures
 - 4. Seasonal work in agriculture

Question ID : 4410091538575

Option 1 ID : 4410096077566

Option 2 ID : 4410096077565

Option 3 ID : 4410096077568

Option 4 ID : 4410096077567

Q.20 Which recommendation of the University Education Commission (1948-49) most significantly shaped higher education in India?

- Ans
- 1. Reduction of university autonomy
 - 2. Exclusion of social sciences from curriculum
 - 3. Mandatory military training for all students
 - 4. Emphasis on research and academic freedom

Question ID : 4410091630681

Option 1 ID : 4410096440872

Option 2 ID : 4410096440873

Option 3 ID : 4410096440870

Option 4 ID : 4410096440871

Section : Discipline2

Q.1 What is a key characteristic of language acquisition in pre-school and early school years?

- Ans
- 1. Children naturally acquire language through interaction, play, and daily communication experiences
 - 2. Children learn language only by memorizing grammar rules and vocabulary lists
 - 3. Children develop language skills only after mastering reading and writing completely
 - 4. Children acquire language solely through formal classroom instruction without practice

Question ID : 4410091542419

Option 1 ID : 4410096092779

Option 2 ID : 4410096092780

Option 3 ID : 4410096092782

Option 4 ID : 4410096092781

Q.2 Which of the following best describes experiential learning?

- Ans
- 1. Learning through direct experience
 - 2. Learning by memorizing theory
 - 3. Learning from teacher's experience
 - 4. Learning from textbook experiences

Question ID : 4410091576584

Option 1 ID : 4410096227148

Option 2 ID : 4410096227147

Option 3 ID : 4410096227150

Option 4 ID : 4410096227149

Q.3 A teacher asks students to observe a peer helping another with homework. Which competency is being developed through this activity?

- Ans
- 1. Understanding prosocial behaviour in groups.
 - 2. Improving skills in complex calculations.
 - 3. Mastering silent reading techniques.
 - 4. Developing artistic drawing skills.

Question ID : 4410091641345
Option 1 ID : 4410096482527
Option 2 ID : 4410096482528
Option 3 ID : 4410096482529
Option 4 ID : 4410096482530

Q.4 Imagine an international collaboration where teachers are developing a curriculum to respect world heritage and promote eradication of global diseases. Which instructional approach, would be most effective in achieving these aims?

- Ans
- 1. Organizing international quizzes that reward speed over understanding
 - 2. Emphasizing memorization of scientific details without practical context
 - 3. Facilitating inquiry-based projects on global heritage and health case studies
 - 4. Teaching national history in isolation from global perspectives

Question ID : 4410091630209
Option 1 ID : 4410096438965
Option 2 ID : 4410096438964
Option 3 ID : 4410096438962
Option 4 ID : 4410096438963

Q.5 A teacher is reflecting on how to improve classroom communication and make lessons more engaging for all students. Based on the nature of pedagogy, which strategy is most effective?

- Ans
- 1. Relying mainly on group discussions without clear learning goals
 - 2. Asking high-performing students to present important topics to the class
 - 3. Giving students multiple activities without connecting them to lesson objectives
 - 4. Incorporating varied methods and focusing on student-teacher interaction.

Question ID : 4410091622896
Option 1 ID : 4410096410359
Option 2 ID : 4410096410357
Option 3 ID : 4410096410358
Option 4 ID : 4410096410356

Q.6 Which feature most clearly represents the essence of experiential learning in the classroom?

- Ans
- 1. It supports understanding when students listen passively during instruction
 - 2. It enhances understanding when students memorise facts without interaction
 - 3. It improves understanding when students read concepts without application
 - 4. It encourages understanding when students explore ideas through active tasks

Question ID : 4410091542415

Option 1 ID : 4410096092765

Option 2 ID : 4410096092764

Option 3 ID : 4410096092766

Option 4 ID : 4410096092763

Q.7 A teacher in a multilingual classroom notices that some students struggle to understand instructions given only in the regional language. To address this, she incorporates visual aids and occasionally uses students' home languages to explain key points. Which principle of teaching is best exemplified in this scenario?

- Ans
- 1. Principle of Direction
 - 2. Principle of Reinforcement
 - 3. Principle of Flexibility
 - 4. Principle of Correlation

Question ID : 4410091683374

Option 1 ID : 4410096640422

Option 2 ID : 4410096640423

Option 3 ID : 4410096640424

Option 4 ID : 4410096640425

Q.8 A primary school teacher wants to enhance students' appreciation of language structures while promoting critical thinking. Which classroom approach best utilizes literature for this dual purpose?

- Ans
- 1. Reading textbooks silently for factual details
 - 2. Using only grammar worksheets for sentence correction
 - 3. Assigning vocabulary lists to be memorized
 - 4. Facilitating group analysis of short stories and poems

Question ID : 4410091679012

Option 1 ID : 4410096624257

Option 2 ID : 4410096624259

Option 3 ID : 4410096624260

Option 4 ID : 4410096624258

Q.9 During an inter-school quiz competition, the winning team credits their victory exclusively to their school's unique, long-standing academic culture. What pattern of group behavior are they primarily applying?

- Ans
- 1. Accelerating collective negotiation
 - 2. Minimizing perceived differences
 - 3. Enhancing self-worth through group
 - 4. Developing unique self-concept

Question ID : 4410091549898
Option 1 ID : 4410096122278
Option 2 ID : 4410096122275
Option 3 ID : 4410096122276
Option 4 ID : 4410096122277

Q.10 A teacher says to a student, "Please close the window." Which function of language is primarily being used in this sentence?

- Ans
- 1. Directive function
 - 2. Expressive function
 - 3. Phatic function
 - 4. Referential function

Question ID : 4410091623560
Option 1 ID : 4410096412825
Option 2 ID : 4410096412826
Option 3 ID : 4410096412824
Option 4 ID : 4410096412827

Q.11 Which attitude is emphasized as part of mindfulness?

- Ans
- 1. Compassion
 - 2. Indifference
 - 3. Competitiveness
 - 4. Aggression

Question ID : 4410091619303
Option 1 ID : 4410096396076
Option 2 ID : 4410096396078
Option 3 ID : 4410096396079
Option 4 ID : 4410096396077

Q.12 What role does language play outside the classroom for young learners?

- Ans
- 1. It restricts children to classroom-based conversations only.
 - 2. It prevents children from expressing emotions at home.
 - 3. It limits children to formal vocabulary use exclusively.
 - 4. It enables children to communicate with peers and family.

Question ID : 4410091641501

Option 1 ID : 4410096483116

Option 2 ID : 4410096483117

Option 3 ID : 4410096483118

Option 4 ID : 4410096483115

Q.13 When a child learns two languages from birth, it is called:

- Ans
- 1. Sequential bilingualism
 - 2. Elite bilingualism
 - 3. Simultaneous bilingualism
 - 4. Subtractive bilingualism

Question ID : 4410091636528

Option 1 ID : 4410096464005

Option 2 ID : 4410096464008

Option 3 ID : 4410096464006

Option 4 ID : 4410096464007

Q.14 Which of these is an example of a source for assessing early language skills?

- Ans
- 1. Teacher observation
 - 2. Final term written examination
 - 3. Prescribed textbook chapters
 - 4. School timetable

Question ID : 4410091620442

Option 1 ID : 4410096400575

Option 2 ID : 4410096400576

Option 3 ID : 4410096400577

Option 4 ID : 4410096400578

Q.15 A teacher designs a field study for students to investigate local ecosystems, requiring them to collect data and reflect on their findings. This approach best exemplifies which aspect of experiential learning?

- Ans
- 1. Passive absorption of lecture content
 - 2. Active engagement in authentic tasks
 - 3. Repetition of textbook definitions
 - 4. Analysis of pre-recorded demonstrations

Question ID : 4410091638546
Option 1 ID : 4410096471867
Option 2 ID : 4410096471866
Option 3 ID : 4410096471868
Option 4 ID : 4410096471869

Q.16 Which of the following is a common approach to practicing mindfulness?

- Ans
- 1. Ignoring emotions
 - 2. Meditation and breathing exercises
 - 3. Memorizing facts only
 - 4. Rushing through tasks

Question ID : 4410091547395
Option 1 ID : 4410096112444
Option 2 ID : 4410096112443
Option 3 ID : 4410096112446
Option 4 ID : 4410096112445

Q.17 A psycholinguist aims to evaluate a multilingual learner's true syntactic competence, distinct from observed errors in immediate production tasks. The most effective assessment strategy requires utilizing comprehensive data sources including:

- Ans
- 1. Error correction checklists
 - 2. Naturalistic speech analysis
 - 3. Timed cloze procedures
 - 4. Rote grammatical drills

Question ID : 4410091550549
Option 1 ID : 4410096124657
Option 2 ID : 4410096124658
Option 3 ID : 4410096124656
Option 4 ID : 4410096124655

Q.18 How might literacy and poverty interact to affect class mobility within a diverse society?

- Ans
- 1. Community support alone eliminates the effects of poverty
 - 2. Increased government spending automatically ensures upward mobility for all
 - 3. Diverse cultural practices always lead to higher mobility
 - 4. Low literacy can limit job opportunities, reinforcing poverty and restricting mobility

Question ID : 4410091624611
Option 1 ID : 4410096416977
Option 2 ID : 4410096416976
Option 3 ID : 4410096416978
Option 4 ID : 4410096416975

Q.19 Which of the following is not correct regarding reflective journaling?

- Ans
- 1. It helps students analyse their actions and responses
 - 2. It limits creativity by restricting personal expression
 - 3. It encourages learners to think deeply about experiences
 - 4. It promotes self-awareness and critical reflection

Question ID : 4410091544169
Option 1 ID : 4410096099776
Option 2 ID : 4410096099777
Option 3 ID : 4410096099775
Option 4 ID : 4410096099778

Q.20 Which strategy is NOT aligned with the guidelines for reflective journal writing?

- Ans
- 1. Writing your thoughts as they flow in your mind
 - 2. Taking guidance from the counsellor when needed
 - 3. Engaging in peer discussion on reflective situations
 - 4. Focusing on right or wrong answers for each reflection

Question ID : 4410091644071
Option 1 ID : 4410096492864
Option 2 ID : 4410096492865
Option 3 ID : 4410096492866
Option 4 ID : 4410096492863

Q.1 Which characteristic did Ronald Edmonds NOT identify as part of an effective school?

- Ans
- 1. Strong administrative leadership
 - 2. Exclusive focus on extracurricular activities
 - 3. Orderly and safe environment
 - 4. Broad instructional focus on basic skills

Question ID : 4410091608146

Option 1 ID : 4410096351512

Option 2 ID : 4410096351515

Option 3 ID : 4410096351513

Option 4 ID : 4410096351514

Q.2 When students observe patterns in worked examples and then derive a general rule for addition and subtraction, which method of teaching mathematics is being applied?

- Ans
- 1. Rote learning of rules
 - 2. Memorizing formulas only
 - 3. Inductive method
 - 4. Deductive method

Question ID : 4410091547827

Option 1 ID : 4410096114139

Option 2 ID : 4410096114141

Option 3 ID : 4410096114140

Option 4 ID : 4410096114142

Q.3 If a child is playing alone but is surrounded by other children, observing them but not joining in, what type of play is this?

- Ans
- 1. Onlooker play
 - 2. Parallel play
 - 3. Associative play
 - 4. Cooperative play

Question ID : 4410091627070

Option 1 ID : 4410096426588

Option 2 ID : 4410096426587

Option 3 ID : 4410096426589

Option 4 ID : 4410096426586

Q.4 What is the primary characteristic of active vocabulary?

- Ans
- 1. Words found in literary texts.
 - 2. Words used only for technical purposes.
 - 3. Words that are confidently used in speech and writing.
 - 4. Words recognized when read or heard but not actively used.

Question ID : 4410091655200
Option 1 ID : 4410096535767
Option 2 ID : 4410096535768
Option 3 ID : 4410096535765
Option 4 ID : 4410096535766

Q.5 What is a primary function of Administrative leadership in schools?

- Ans
- 1. Evaluating student performance without supervising teachers or staff
 - 2. Planning extracurricular activities without attention to school administration
 - 3. Managing school operations, resources, and organizational efficiency effectively
 - 4. Focusing only on classroom teaching and ignoring school management tasks

Question ID : 4410091547380
Option 1 ID : 4410096112386
Option 2 ID : 4410096112385
Option 3 ID : 4410096112383
Option 4 ID : 4410096112384

Q.6 Which term describes words you understand when you read or hear them but rarely use yourself?

- Ans
- 1. Active vocabulary
 - 2. Passive vocabulary
 - 3. Technical vocabulary
 - 4. Core vocabulary

Question ID : 4410091609349
Option 1 ID : 4410096356321
Option 2 ID : 4410096356320
Option 3 ID : 4410096356322
Option 4 ID : 4410096356323

Q.7 An educator who encourages students to think independently and respects diverse viewpoints is demonstrating which important characteristic?

- Ans
- 1. Openness to new ideas
 - 2. Only following authority
 - 3. Strict adherence to routine
 - 4. Prioritizing grades over learning

Question ID : 4410091686730
Option 1 ID : 4410096653750
Option 2 ID : 4410096653752
Option 3 ID : 4410096653751
Option 4 ID : 4410096653753

Q.8 Which of the following best represents ethical behavior for a teacher today?

- Ans
- 1. Showing favoritism to certain students
 - 2. Discipline through punishment
 - 3. Sharing students' personal data openly
 - 4. Fairness, confidentiality, integrity

Question ID : 4410091548362
Option 1 ID : 4410096116153
Option 2 ID : 4410096116156
Option 3 ID : 4410096116154
Option 4 ID : 4410096116155

Q.9 To promote a positive attitude toward mathematics, which objective should be prioritized in elementary education?

- Ans
- 1. Fostering interest and enjoyment in mathematics learning
 - 2. Using pressure to motivate mathematical performance
 - 3. Rewarding only correct answers immediately
 - 4. Emphasizing speed over understanding in tasks

Question ID : 4410091646865
Option 1 ID : 4410096503713
Option 2 ID : 4410096503716
Option 3 ID : 4410096503715
Option 4 ID : 4410096503714

Q.10 A learner demonstrates transfer by applying a study strategy from biology to solve complex proofs in mathematics. Which mechanism best explains this high-road transfer?

- Ans
- 1. Near transfer through identical elements of the tasks
 - 2. Automatic stimulus generalization based on surface similarity
 - 3. Deliberate abstraction and mindful search for underlying principles
 - 4. Classical conditioning associating success with the strategy

Question ID : 4410091563108
Option 1 ID : 4410096173995
Option 2 ID : 4410096173997
Option 3 ID : 4410096173998
Option 4 ID : 4410096173996

Q.11 Which of the following best reflects an alternative school's vision when conceptualising its curriculum?

- Ans
- 1. Curriculum based on experience, community input, and learner needs
 - 2. Curriculum designed by removing every form of assessment
 - 3. Curriculum focused solely on academic subjects like maths and science
 - 4. Curriculum fixed only by the state syllabus without variation

Question ID : 4410091548435
Option 1 ID : 4410096116441
Option 2 ID : 4410096116443
Option 3 ID : 4410096116442
Option 4 ID : 4410096116440

Q.12 What is a major sociolinguistic effect of the global spread of English?

- Ans
- 1. It has had no impact on indigenous languages.
 - 2. It has standardized English worldwide with no local differences.
 - 3. It only benefits non-native English speakers.
 - 4. It has led to variation in English and influenced local languages.

Question ID : 4410091576720
Option 1 ID : 4410096227732
Option 2 ID : 4410096227735
Option 3 ID : 4410096227734
Option 4 ID : 4410096227733

Q.13 Which of the following options best exemplifies the impact of a learner's socio-cultural context on the process of concept formation in a classroom setting?

- Ans
- 1. A teacher uses visual aids to clarify new topics for students.
 - 2. A curriculum is organized to introduce abstract ideas before concrete examples.
 - 3. A student's motivation improves when rewarded for accurate answers.
 - 4. Community traditions shape cooperative learning.

Question ID : 4410091609831

Option 1 ID : 4410096358238

Option 2 ID : 4410096358239

Option 3 ID : 4410096358236

Option 4 ID : 4410096358237

Q.14 A teacher uses manipulatives to help children understand the concept of place value. Based on Piaget's principles, why is this approach effective for primary school learners?

- Ans
- 1. Manipulatives support concrete reasoning in this developmental stage
 - 2. Manipulatives help children skip to formal operational thinking
 - 3. Abstract symbols are easier to understand for young children
 - 4. Memorization of facts is more effective than conceptual understanding

Question ID : 4410091627355

Option 1 ID : 4410096427706

Option 2 ID : 4410096427709

Option 3 ID : 4410096427707

Option 4 ID : 4410096427708

Q.15 Which of the following is a defence mechanism in which one performs reverted behaviour?

- Ans
- 1. Regression
 - 2. Projection
 - 3. Repression
 - 4. Reaction formation

Question ID : 4410091546952

Option 1 ID : 4410096110677

Option 2 ID : 4410096110679

Option 3 ID : 4410096110678

Option 4 ID : 4410096110676

Q.16 A teacher's professional responsibility toward learners primarily includes:

- Ans 1. Promoting holistic development
 2. Ensuring syllabus completion
 3. Enforcing institutional authority
 4. Maximizing examination scores

Question ID : 4410091580916
Option 1 ID : 4410096245024
Option 2 ID : 4410096245022
Option 3 ID : 4410096245025
Option 4 ID : 4410096245023

Q.17 From the options provided, which factor is identified as a key influence on the formation of gender roles from the ecological perspective?

- Ans 1. Genetic traits inherited from family members
 2. Interaction between people and their surroundings
 3. Personal choices made by individuals alone
 4. Natural affinity towards gender

Question ID : 4410091603886
Option 1 ID : 4410096334734
Option 2 ID : 4410096334732
Option 3 ID : 4410096334735
Option 4 ID : 4410096334733

Q.18 In many parts of India, sons are often preferred over daughters because they are expected to carry the family name, perform last rites, and provide financial support to parents. Which underlying factor most strongly sustains this preference?

- Ans 1. Complete economic independence of all women
 2. Equal property rights for daughters and sons
 3. High representation of women in political leadership
 4. Patriarchal inheritance and family lineage systems

Question ID : 4410091636970
Option 1 ID : 4410096465717
Option 2 ID : 4410096465719
Option 3 ID : 4410096465720
Option 4 ID : 4410096465718

Q.19 The conventional process of schooling primarily aims to model learners into becoming the:

- Ans 1. Ideal citizen subject
 2. Critical evaluator
 3. Self-reliant professional
 4. Revolutionary thinker

Question ID : 4410091558761
Option 1 ID : 4410096157435
Option 2 ID : 4410096157436
Option 3 ID : 4410096157434
Option 4 ID : 4410096157433

Q.20 Choose the sentence that correctly applies subject-verb agreement when the subject is separated from the verb by additional phrases.

- Ans 1. The players on the team runs every morning.
 2. The dogs in the yard barks loudly at night.
 3. A box of chocolates are missing.
 4. The bouquet of roses smells wonderful in the morning.

Question ID : 4410091609819
Option 1 ID : 4410096358189
Option 2 ID : 4410096358191
Option 3 ID : 4410096358190
Option 4 ID : 4410096358188

Section : Discipline4

Q.1 What was one of the significant effects of liberalization policies on education in the last decade?

- Ans 1. Increase in student enrollment in government schools
 2. Introduction of new curricula by government institutions
 3. Encouragement of private sector participation in education
 4. Reduction in government funding for education

Question ID : 4410091637878
Option 1 ID : 4410096469068
Option 2 ID : 4410096469069
Option 3 ID : 4410096469067
Option 4 ID : 4410096469066

Q.2 A newly appointed school director is asked to draft a strategic plan for the next five years. Which responsibility must the director integrate to align with their designated school law mandates and school improvement?

- Ans
- 1. Attending all board meetings as a primary role
 - 2. Focusing exclusively on fundraising activities
 - 3. Creating long-term plans outlining goals for the school
 - 4. Managing staff members without engaging in long-term planning

Question ID : 4410091604424
Option 1 ID : 4410096336868
Option 2 ID : 4410096336867
Option 3 ID : 4410096336869
Option 4 ID : 4410096336866

Q.3 How does the principle of immediate confirmation of lesson planning benefit students in the learning process?

- Ans
- 1. It breaks down learning into small steps
 - 2. It allows self-paced learning
 - 3. It provides reinforcement through immediate feedback
 - 4. It ensures active participation

Question ID : 4410091636956
Option 1 ID : 4410096465660
Option 2 ID : 4410096465658
Option 3 ID : 4410096465657
Option 4 ID : 4410096465659

Q.4 How do textbooks support both teachers and students in the classroom?

- Ans
- 1. By guaranteeing student engagement in every lesson.
 - 2. By directly assessing student performance.
 - 3. By acting only as reference books for students.
 - 4. By organizing information and guiding lesson planning.

Question ID : 4410091616331
Option 1 ID : 4410096384251
Option 2 ID : 4410096384253
Option 3 ID : 4410096384252
Option 4 ID : 4410096384250

Q.5 Which teaching method emphasizes learning grammar rules and vocabulary?

Ans 1. Grammar Translation Method

2. Project Method

3. Direct Method

4. Audio-Lingual Method

Question ID : 4410091636075

Option 1 ID : 4410096462261

Option 2 ID : 4410096462264

Option 3 ID : 4410096462262

Option 4 ID : 4410096462263

Q.6 When governments make laws that support women, persons with disabilities, and disadvantaged groups, they are promoting:

Ans 1. Social actions that increase unfair treatment

2. Legal steps that reduce equal participation

3. Social justice that ensures fairness for all

4. Public rules that weaken vulnerable groups

Question ID : 4410091548525

Option 1 ID : 4410096116796

Option 2 ID : 4410096116799

Option 3 ID : 4410096116797

Option 4 ID : 4410096116798

Q.7 A school principal seeks to foster inclusive decision-making. Which action best demonstrates this using support organizations?

Ans 1. Consulting teachers privately

2. Sending newsletters to parents only

3. Inviting PTA and NGOs to planning

4. Following government mandates alone

Question ID : 4410091636999

Option 1 ID : 4410096465827

Option 2 ID : 4410096465826

Option 3 ID : 4410096465825

Option 4 ID : 4410096465828

Q.8 In the EVS curriculum at the primary level, the integration of themes like *Family and Friends, Food, and Water* mainly reflects which curricular principle?

- Ans
- 1. Subject-wise compartmentalization
 - 2. Child-centered thematic integration
 - 3. Spiral progression of scientific concepts
 - 4. Early disciplinary specialization

Question ID : 4410091570018

Option 1 ID : 4410096201073

Option 2 ID : 4410096201074

Option 3 ID : 4410096201075

Option 4 ID : 4410096201076

Q.9 Which aspect of writing evaluation focuses more on grammatical and lexical structures, spelling, punctuation, and handwriting?

- Ans
- 1. Accuracy
 - 2. Complexity
 - 3. Appropriacy
 - 4. Range

Question ID : 4410091572466

Option 1 ID : 4410096210796

Option 2 ID : 4410096210799

Option 3 ID : 4410096210797

Option 4 ID : 4410096210798

Q.10 Which statement best describes low-cost and no-cost teaching materials in EVS?

- Ans
- 1. Relying solely on digital applications
 - 2. Importing expensive laboratory equipment
 - 3. Using locally available resources for activities
 - 4. Purchasing branded educational kits

Question ID : 4410091641202

Option 1 ID : 4410096481963

Option 2 ID : 4410096481962

Option 3 ID : 4410096481961

Option 4 ID : 4410096481964

Q.11 What is an advantage of adapting textbooks in the learning process?

- Ans
- 1. It discourages active student involvement.
 - 2. It standardizes teaching methods universally.
 - 3. It eliminates the need for digital resources.
 - 4. It allows teachers to personalize teaching materials.

Question ID : 4410091636977
Option 1 ID : 4410096465744
Option 2 ID : 4410096465743
Option 3 ID : 4410096465741
Option 4 ID : 4410096465742

Q.12 Under India's Shala Siddhi framework, what precise measurement approach operationalizes school effectiveness through domains and standards?

- Ans
- 1. Self/external evaluations against core standards under key domains like equitable learning environments and governance.
 - 2. Faculty appraisal scores aggregated from peer observations exceeding predefined threshold competencies biennially.
 - 3. Annual audits of budget utilization rates aligned with state-specific enrollment growth projections quarterly.
 - 4. Pupil attendance percentages benchmarked against community demographic profiles via localized sampling surveys.

Question ID : 4410091563915
Option 1 ID : 4410096177249
Option 2 ID : 4410096177251
Option 3 ID : 4410096177250
Option 4 ID : 4410096177252

Q.13 Which approach in teaching Environmental Studies emphasizes understanding concepts and their relationships clearly?

- Ans
- 1. The process approach that relies only on memorization of facts and definitions
 - 2. The scientific approach that ignores observation and practical activities entirely
 - 3. The conceptual approach that focuses on clear understanding of ideas and principles
 - 4. The inclusive approach that excludes certain learners from active participation

Question ID : 4410091547476
Option 1 ID : 4410096112765
Option 2 ID : 4410096112764
Option 3 ID : 4410096112766
Option 4 ID : 4410096112763

Q.14 A teacher plans a theme-based EVS unit on 'Food' that includes field visits, discussions on local dishes, and experiments on digestion. What type of approach is this?

- Ans
- 1. Conceptual approach using stories only
 - 2. Process approach based only on surveys
 - 3. Scientific approach focused on experiments only
 - 4. Integrated approach with experiential components

Question ID : 4410091633056
Option 1 ID : 4410096450343
Option 2 ID : 4410096450344
Option 3 ID : 4410096450342
Option 4 ID : 4410096450345

Q.15 Which step should come first when designing a lesson plan within a unit?

- Ans
- 1. Administering final tests
 - 2. Assigning grades
 - 3. Distributing textbooks
 - 4. Identifying learning objectives

Question ID : 4410091637843
Option 1 ID : 4410096468937
Option 2 ID : 4410096468935
Option 3 ID : 4410096468936
Option 4 ID : 4410096468934

Q.16 Which of the following most accurately describes a significant impact of globalisation on higher education in developing countries?

- Ans
- 1. Focusing only on local curriculum standards
 - 2. Restricting instruction in foreign languages
 - 3. Limiting access to new educational technologies
 - 4. Increasing collaboration in research and curriculum

Question ID : 4410091624050
Option 1 ID : 4410096414780
Option 2 ID : 4410096414783
Option 3 ID : 4410096414782
Option 4 ID : 4410096414781

Q.17 Which step best ensures lesson objectives align with unit outcomes during planning?

- Ans
- 1. Sequencing activities
 - 2. Selecting materials
 - 3. Mapping objectives to outcomes
 - 4. Assessing prior knowledge

Question ID : 4410091635480
Option 1 ID : 4410096459939
Option 2 ID : 4410096459940
Option 3 ID : 4410096459941
Option 4 ID : 4410096459942

Q.18 The phase of lesson planning in which the teacher revises and helps students recall the main points taught in the lesson is called:

- Ans
- 1. Preparation
 - 2. Summarization/Recapitulation
 - 3. Presentation
 - 4. Evaluation and Feedback

Question ID : 4410091580419
Option 1 ID : 4410096243017
Option 2 ID : 4410096243019
Option 3 ID : 4410096243018
Option 4 ID : 4410096243020

Q.19 Which of the following statements best describes the difference between equity and equality in education?

- Ans
- 1. Equality is the process of providing fair opportunities; equity is the outcome of that process
 - 2. Equity means all students get the same resources; equality ensures fairness based on individual needs
 - 3. Equality considers personal conditions of students; equity ignores them
 - 4. Equity refers to fairness and inclusion; equality refers to providing the same opportunities to all

Question ID : 4410091580512
Option 1 ID : 4410096243394
Option 2 ID : 4410096243393
Option 3 ID : 4410096243395
Option 4 ID : 4410096243396

Q.20 A teacher is concerned about the overuse of ICT in primary classrooms. Based on best practices in the context, what strategy should she employ?

- Ans 1. Limit ICT to 20% of class time and blend with group discussions
 2. Eliminate group talks to maximize screen time
 3. Increase ICT usage to every lesson and minimize offline work
 4. Replace all formative assessments with ICT-only tools

Question ID : 4410091608942
Option 1 ID : 4410096354684
Option 2 ID : 4410096354686
Option 3 ID : 4410096354685
Option 4 ID : 4410096354687

Section : Discipline5

Q.1 If a school uses student portfolios, self-assessment, and peer assessment together, what is the likely main goal?

- Ans 1. To promote reflective learning and continuous student self-improvement
 2. To replace formal examinations with informal classroom activities
 3. To reduce the teacher's responsibility in evaluating student performance
 4. To standardise assessment practices across different subject disciplines

Question ID : 4410091608829
Option 1 ID : 4410096354237
Option 2 ID : 4410096354236
Option 3 ID : 4410096354238
Option 4 ID : 4410096354239

Q.2 A student reflecting on their own thinking process during problem-solving is demonstrating which type of knowledge?

- Ans 1. Conceptual Knowledge
 2. Factual Knowledge
 3. Procedural Knowledge
 4. Metacognitive Knowledge

Question ID : 4410091633992
Option 1 ID : 4410096454063
Option 2 ID : 4410096454064
Option 3 ID : 4410096454065
Option 4 ID : 4410096454062

Q.3 The Laboratory Method in mathematics is primarily based on the maxim:

- Ans
- 1. Learning by observing others
 - 2. Learning by memorising
 - 3. Learning by doing
 - 4. Learning by listening

Question ID : 4410091572491
Option 1 ID : 4410096210895
Option 2 ID : 4410096210892
Option 3 ID : 4410096210894
Option 4 ID : 4410096210893

Q.4 What is the primary focus of science education in the modern period?

- Ans
- 1. Practical understanding catering to learners' abilities and values
 - 2. Fact-based objective learning
 - 3. Globalized knowledge
 - 4. Abstract knowledge

Question ID : 4410091639301
Option 1 ID : 4410096474775
Option 2 ID : 4410096474774
Option 3 ID : 4410096474776
Option 4 ID : 4410096474773

Q.5 A disorder that includes difficulty staying focused and paying attention, difficulty controlling behaviour and hyperactivity is called _____

- Ans
- 1. Visual Perceptual
 - 2. Attention Deficit Hyperactivity Disorder (ADHD)
 - 3. Executive functioning
 - 4. Language processing disorder

Question ID : 4410091548372
Option 1 ID : 4410096116194
Option 2 ID : 4410096116193
Option 3 ID : 4410096116192
Option 4 ID : 4410096116195

Q.6 Which of the following scenarios best illustrates the use of deductive reasoning in a scientific context?

- Ans
- 1. Drawing general conclusions from experimental results
 - 2. Identifying patterns from collected data
 - 3. Use a law to predict an experiment's outcome
 - 4. Formulating a hypothesis from observations

Question ID : 4410091626524

Option 1 ID : 4410096424469

Option 2 ID : 4410096424471

Option 3 ID : 4410096424468

Option 4 ID : 4410096424470

Q.7 When selecting teaching aids for a multilingual classroom, what should be the primary consideration according to best practices and NEP 2020 guidelines?

- Ans
- 1. Learner needs and objectives
 - 2. Cost of materials
 - 3. Availability of technology
 - 4. Teacher preference

Question ID : 4410091633477

Option 1 ID : 4410096452024

Option 2 ID : 4410096452025

Option 3 ID : 4410096452023

Option 4 ID : 4410096452022

Q.8 Which of the following statements best describes masculinity and femininity?

- Ans
- 1. They are biologically determined traits.
 - 2. They only apply to male individuals.
 - 3. They are social and cultural constructs.
 - 4. They are fixed and unchanging over time.

Question ID : 4410091582081

Option 1 ID : 4410096249592

Option 2 ID : 4410096249595

Option 3 ID : 4410096249594

Option 4 ID : 4410096249593

Q.9 Which of the following best illustrates systemic exclusion in the Indian education system?

- Ans
- 1. Peer group activities encouraging collaborative learning
 - 2. Children with disabilities being provided separate classrooms and teachers
 - 3. Limited curriculum content addressing marginalized communities' histories
 - 4. Students receiving extra tutoring for competitive exams

Question ID : 4410091551126
Option 1 ID : 4410096126746
Option 2 ID : 4410096126744
Option 3 ID : 4410096126743
Option 4 ID : 4410096126745

Q.10 What is a major factor contributing to inequality in the Indian education system?

- Ans
- 1. Technology use
 - 2. Urbanization
 - 3. Climate change
 - 4. Caste system

Question ID : 4410091603562
Option 1 ID : 4410096333446
Option 2 ID : 4410096333445
Option 3 ID : 4410096333447
Option 4 ID : 4410096333444

Q.11 Why is mathematics considered important in education?

- Ans
- 1. It develops logical problem-solving skills
 - 2. It is mainly for memorizing facts
 - 3. It is only needed for math teachers
 - 4. It does not relate to other subjects

Question ID : 4410091623675
Option 1 ID : 4410096413280
Option 2 ID : 4410096413281
Option 3 ID : 4410096413282
Option 4 ID : 4410096413283

Q.12 Which classroom strategy is most effective for promoting inclusive education and addressing gender-based inequalities in Indian schools?

- Ans
- 1. Encouraging mixed-gender group work and participation
 - 2. Implementing gender-sensitive pedagogy and curriculum
 - 3. Ensuring equal access to learning materials for all students
 - 4. Celebrating cultural diversity through festivals and events

Question ID : 4410091626591
Option 1 ID : 4410096424738
Option 2 ID : 4410096424739
Option 3 ID : 4410096424737
Option 4 ID : 4410096424736

Q.13 Which Sustainable Development Goal specifically focuses on achieving gender equality and empowering women and girls?

- Ans
- 1. Goal Ten on reducing inequality within societies
 - 2. Goal Five on gender equality and empowerment
 - 3. Goal Four on quality education for all
 - 4. Goal Eight on decent work and economic growth

Question ID : 4410091609872
Option 1 ID : 4410096358402
Option 2 ID : 4410096358400
Option 3 ID : 4410096358399
Option 4 ID : 4410096358401

Q.14 Which aspect best demonstrates the self-correcting nature of science as a discipline?

- Ans
- 1. Random selection of observations
 - 2. Personal opinions of scientists
 - 3. Peer review and replication of studies
 - 4. Use of traditional beliefs

Question ID : 4410091638679
Option 1 ID : 4410096472470
Option 2 ID : 4410096472469
Option 3 ID : 4410096472468
Option 4 ID : 4410096472471

Q.15 If a primary mathematics teacher wants to design lessons that ensure both topic coverage and deep conceptual understanding, which approach should they prioritize?

- Ans
- 1. Process
 - 2. Skills drill
 - 3. Topics
 - 4. Conceptual fields

Question ID : 4410091606143
Option 1 ID : 4410096343598
Option 2 ID : 4410096343599
Option 3 ID : 4410096343597
Option 4 ID : 4410096343596

Q.16 As of January 2025, what percentage of seats in national parliaments are held by women?

- Ans
- 1. 27.2 per cent
 - 2. 35 per cent
 - 3. 50 per cent
 - 4. 19 per cent

Question ID : 4410091609873
Option 1 ID : 4410096358403
Option 2 ID : 4410096358406
Option 3 ID : 4410096358404
Option 4 ID : 4410096358405

Q.17 Which of the following best describes the nature of science as a discipline?

- Ans
- 1. Science never changes its theories
 - 2. Science only studies living things
 - 3. Science is based on observation and experimentation
 - 4. Science is based on myths and beliefs

Question ID : 4410091627884
Option 1 ID : 4410096429732
Option 2 ID : 4410096429733
Option 3 ID : 4410096429730
Option 4 ID : 4410096429731

Q.18 Which teaching aid would be best used to visually display the structure of a sentence in a language class?

- Ans 1. Chart
 2. Tape recorder
 3. Blackboard
 4. Flashcards

Question ID : 4410091687781
Option 1 ID : 4410096657912
Option 2 ID : 4410096657910
Option 3 ID : 4410096657911
Option 4 ID : 4410096657913

Q.19 Schools influence gender roles primarily through:

- Ans 1. Home-based socialisation alone
 2. Curriculum, pedagogy, and interactions
 3. Individual student preferences
 4. Biological differences among learners

Question ID : 4410091548416
Option 1 ID : 4410096116366
Option 2 ID : 4410096116364
Option 3 ID : 4410096116367
Option 4 ID : 4410096116365

Q.20 A teacher explains that math helps in logical thinking and problem-solving in daily life. This highlights:

- Ans 1. Nature of mathematics as abstract art
 2. Use of storytelling only
 3. Focus on memorizing formulas
 4. Importance of mathematics for logical thinking

Question ID : 4410091570250
Option 1 ID : 4410096201989
Option 2 ID : 4410096201992
Option 3 ID : 4410096201991
Option 4 ID : 4410096201990