

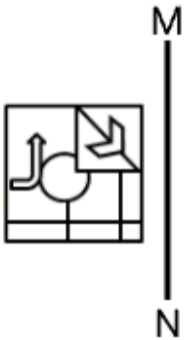


GOVT. OF NCT OF DELHI
Delhi Subordinate Services Selection Board
FC-18, Institutional Area, Karkardooma, Delhi - 110092.
www.dsssb.delhigovt.nic.in

Participant ID	[REDACTED]
Participant Name	[REDACTED]
Test Center Name	iON Digital Zone iDZ 1 Sector 62
Test Date	10/04/2026
Test Time	9:00 AM - 11:00 AM
Subject	Assistant Teacher Primary

Section : General Intelligence and Reasoning Ability

Q.1 Select the correct mirror image of the given figure when the mirror is placed at MN as shown below.



Ans

- ✗ 1.
- ✗ 2.
- ✓ 3.
- ✗ 4.

Question ID : 4410091614488
Option 1 ID : 4410096376771
Option 2 ID : 4410096376769
Option 3 ID : 4410096376770
Option 4 ID : 4410096376772

Adda247

Test Prime

ALL EXAMS, ONE SUBSCRIPTION



1,00,000+
Mock Tests



**Personalised
Report Card**



**Unlimited
Re-Attempt**



600+
Exam Covered



25,000+ Previous
Year Papers



500%
Refund



ATTEMPT FREE MOCK NOW

Q.2 What should come in place of '?' in the given series?

163 132 107 88 75 ?

- Ans
- 1. 59
 - 2. 65
 - 3. 68
 - 4. 61

Question ID : 441009176392
 Option 1 ID : 441009697494
 Option 2 ID : 441009697492
 Option 3 ID : 441009697491
 Option 4 ID : 441009697493

Q.3 C is the brother of O. O is the father of R. T is the father of Y. Y is the son of R. How is T related to C?

- Ans
- 1. Brother's daughter
 - 2. Daughter's husband
 - 3. Brother's daughter's son
 - 4. Brother's daughter's husband

Question ID : 4410091618988
 Option 1 ID : 4410096394827
 Option 2 ID : 4410096394826
 Option 3 ID : 4410096394825
 Option 4 ID : 4410096394824

Q.4 All 50 students in a class are standing in a straight line facing the north. Shyam is 9th from the right end while Ram is 15th from the left end. How many students stand between Shyam and Ram?

- Ans
- 1. 25
 - 2. 28
 - 3. 26
 - 4. 27

Question ID : 441009216728
 Option 1 ID : 441009850952
 Option 2 ID : 441009850954
 Option 3 ID : 441009850951
 Option 4 ID : 441009850953

Q.5 Based on the English alphabetical order, three of the following four letter-cluster pairs are alike in a certain way and thus form a group. Which is the one that does not belong to that group?

(Note: The odd one out is not based on the number of consonants/vowels or their position in the letter cluster.)

- Ans
- 1. CB - DC
 - 2. GF - HG
 - 3. IH - JH
 - 4. ON - PO

Question ID : 441009790207
 Option 1 ID : 4410093114829
 Option 2 ID : 4410093114830
 Option 3 ID : 4410093114828
 Option 4 ID : 4410093114827

Q.6 Each vowel in the word POLARISE is changed to the letter immediately preceding it in the English alphabetical order and each consonant is changed to the letter immediately following it in the English alphabetical order. How many letters will appear exactly twice in the new group of letters thus formed?

- Ans
- 1. Two
 - 2. One
 - 3. Zero
 - 4. Three

Question ID : 441009216465
 Option 1 ID : 441009849901
 Option 2 ID : 441009849900
 Option 3 ID : 441009849899
 Option 4 ID : 441009849902

Q.7 Based on the English alphabetical order, three of the following four letter-cluster pairs are alike in a certain way and thus form a group. Which letter-cluster pair DOES NOT belong to that group?
 (Note: The odd one out is not based on the number of consonants/vowels or their position in the letter-cluster.)

- Ans
- 1. LO-QJ
 - 2. EH-JD
 - 3. HK-MF
 - 4. NQ-SL

Question ID : 441009346629
 Option 1 ID : 4410091352583
 Option 2 ID : 4410091352581
 Option 3 ID : 4410091352582
 Option 4 ID : 4410091352584

Q.8 Refer to the following series and answer the question (all numbers are single digit numbers only).

(Left) 3 7 4 5 2 4 8 4 9 4 2 1 5 3 4 6 2 1 5 7 3 7 5 9 8 5 (Right)

How many such odd digits are there each of which is immediately preceded by an odd digit and also immediately followed by an even digit?

- Ans
- 1. 2
 - 2. 3
 - 3. 4
 - 4. 1

Question ID : 441009783648
 Option 1 ID : 4410093088596
 Option 2 ID : 4410093088597
 Option 3 ID : 4410093088598
 Option 4 ID : 4410093088595

Q.9 If + means -, - means x, x means ÷, ÷ means +, then what will come in place of the question mark (?) in the following equation?

$$156 + 22 - 3 \div 45 \times 9 = ?$$

- Ans
- 1. 94
 - 2. 96
 - 3. 95
 - 4. 97

Question ID : 441009553717
Option 1 ID : 4410092170182
Option 2 ID : 4410092170184
Option 3 ID : 4410092170183
Option 4 ID : 4410092170185

Q.10 Seven boxes, F, I, L, T, E, R and S, are kept one over the other but not necessarily in the same order. Only three boxes are kept below L. Only two boxes are kept between L and I. Only E is kept above R. F is kept at some place below T and at some place above S. Which box is kept at second position from the bottom?

- Ans
- 1. S
 - 2. L
 - 3. R
 - 4. F

Question ID : 4410091518838
Option 1 ID : 4410095998633
Option 2 ID : 4410095998631
Option 3 ID : 4410095998632
Option 4 ID : 4410095998630

Q.11 What will come in place of '?' in the following equation, if '+' and '-' are interchanged and 'x' and '÷' are interchanged?

$$308 \times 14 - 17 \div 9 + 124 = ?$$

- Ans
- 1. 45
 - 2. 49
 - 3. 56
 - 4. 51

Question ID : 4410091528092
Option 1 ID : 4410096035561
Option 2 ID : 4410096035562
Option 3 ID : 4410096035564
Option 4 ID : 4410096035563

Q.12 Refer to the following letter series and answer the question
(Left) T H T V Y W J C I O Q O J K L W W Z E (Right)
How many such vowels are there each of which is immediately preceded by a consonant and also immediately followed by a consonant?

- Ans
- 1. 4
 - 2. 3
 - 3. 2
 - 4. 1

Question ID : 441009779685
Option 1 ID : 4410093072746
Option 2 ID : 4410093072745
Option 3 ID : 4410093072744
Option 4 ID : 4410093072743

Q.13 FBAB is related to CYXY in a certain way based on the English alphabetical order. In the same way, BXWX is related to YUTU. To which of the following is KGFG related, following the same logic?

- Ans
- 1. HD CD
 - 2. HE BH
 - 3. HC BD
 - 4. HD BD

Question ID : 441009779052
Option 1 ID : 4410093070211
Option 2 ID : 4410093070212
Option 3 ID : 4410093070213
Option 4 ID : 4410093070214

Q.14 Below are given two sets of numbers. In each set of numbers, a certain mathematical operation on first number results in the second number. Similarly, certain mathematical operation on second number results in the third number and so on. Which of the given options follows the same set of operations as in question?
(NOTE : Operations should be performed on the whole numbers, without breaking down the numbers into its constituent digits. E.g. 13 – Operations on 13 such as adding / subtracting / multiplying etc. to 13 can be performed. Breaking down 13 into 1 and 3 and then performing mathematical operations on 1 and 3 is not allowed.)

33 - 36 - 31 - 124
38 - 41 - 36 - 144

- Ans
- 1. 31 - 33 - 28 - 112
 - 2. 49 - 52 - 47 - 188
 - 3. 41 - 44 - 37 - 185
 - 4. 32 - 36 - 31 - 155

Question ID : 441009528658
Option 1 ID : 4410092070038
Option 2 ID : 4410092070036
Option 3 ID : 4410092070039
Option 4 ID : 4410092070037

Q.15 Six people, A, B, C, D, E and F, are sitting in a row, facing north.
Only two people sit between B and F. D sits to the immediate left of F. A sits second to the right of E. C is an immediate neighbour of F. E sits to the immediate left of B.
How many people sit between B and C?

- Ans
- 1. One
 - 2. Two
 - 3. None
 - 4. Three

Question ID : 4410091422290
Option 1 ID : 4410095618067
Option 2 ID : 4410095618068
Option 3 ID : 4410095618066
Option 4 ID : 4410095618069

Q.16 In a certain code language, 'FATE' is coded as '4265' and 'FALE' is coded as '2145'.
What is the code for 'L' in the given code language?

- Ans
- 1. 2
 - 2. 1
 - 3. 6
 - 4. 4

Question ID : 4410091614539
Option 1 ID : 4410096376971
Option 2 ID : 4410096376969
Option 3 ID : 4410096376970
Option 4 ID : 4410096376972

Q.17 Refer to the following letter series and answer the question that follows. Counting to be done from left to right only.

(Left) Q A W S E D U J Y H B V G T I O K B Y H T U I B C A D E Y E U (Right)

How many such consonants are there each of which is immediately preceded by a vowel and also immediately followed by a vowel?

- Ans
- 1. None
 - 2. Two
 - 3. Three
 - 4. One

Question ID : 441009787531
Option 1 ID : 4410093104123
Option 2 ID : 4410093104125
Option 3 ID : 4410093104126
Option 4 ID : 4410093104124

Q.18 Each of L, A, Y, E, R, S and T has an exam on a different day of a week starting from Monday and ending on Sunday of the same week. S has exam on Thursday, and Y has exam on Saturday. R has exam immediately before A. T has exam on one of the days after L. E has exam immediately after A. How many people have exams between T and E?

- Ans
- 1. One
 - 2. Three
 - 3. Four
 - 4. Two

Question ID : 4410091614384

Option 1 ID : 4410096376349

Option 2 ID : 4410096376351

Option 3 ID : 4410096376352

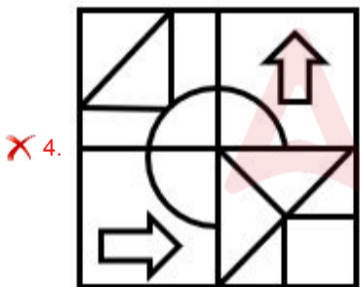
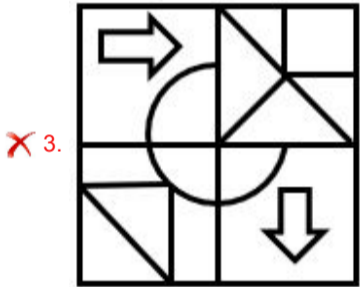
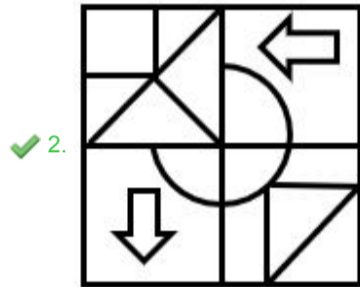
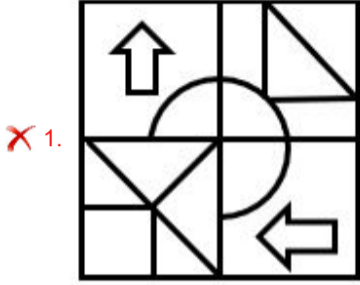
Option 4 ID : 4410096376350



Q.19 Select the option in which the given figure is embedded (rotation is NOT allowed).



Ans



Question ID : 441009906457
Option 1 ID : 4410093579637
Option 2 ID : 4410093579636
Option 3 ID : 4410093579638
Option 4 ID : 4410093579639

Q.20 Which of the following letter-number clusters will replace the question mark (?) in the given series to make it logically complete?
IFK167, DAF147, YVA127, TQV107, ?

- Ans
- 1. OLP87
 - 2. OUQ87
 - 3. VLQ87
 - 4. OLQ87

Question ID : 4410091618955
Option 1 ID : 4410096394694
Option 2 ID : 4410096394693
Option 3 ID : 4410096394695
Option 4 ID : 4410096394692

Section : General Awareness

Q.1 When did India celebrate its First National Space Day in 2024?

- Ans
- 1. November 23, 2024
 - 2. October 23, 2024
 - 3. July 23, 2024
 - 4. August 23, 2024

Question ID : 441009246793
Option 1 ID : 441009961469
Option 2 ID : 441009961468
Option 3 ID : 441009961466
Option 4 ID : 441009961467

Q.2 According to the Indian Constitution, the executive power of the Union is:

- Ans
- 1. Shared equally between the President and the Chief Justice of India
 - 2. Vested solely in the Prime Minister
 - 3. Exercised only during a national emergency
 - 4. Vested in the President and exercised by him directly or through subordinate officers

Question ID : 441009672153
Option 1 ID : 4410092642708
Option 2 ID : 4410092642706
Option 3 ID : 4410092642709
Option 4 ID : 4410092642707

Q.3 The second Five Year Plan in India was formulated on whose ideas?

- Ans
- 1. T.T. Krishnamachari
 - 2. Prasanta Chandra Mahalanobis
 - 3. Dr. John Mathai
 - 4. R.K. Shanmukham Chetty

Question ID : 441009510552
Option 1 ID : 4410091997367
Option 2 ID : 4410091997368
Option 3 ID : 4410091997369
Option 4 ID : 4410091997366

Q.4 Which of the following statements is CORRECT regarding the term of office of the President of India?

- Ans 1. The President can only be removed by the Prime Minister or the Chief Justice of India.
2. The President continues in office even after the term ends, until a successor takes charge.
3. The President must vacate office exactly on the completion of five years.
4. The President holds office for six years and cannot resign.

Question ID : 441009672159
Option 1 ID : 4410092642732
Option 2 ID : 4410092642731
Option 3 ID : 4410092642733
Option 4 ID : 4410092642730

Q.5 Pyrolusite ore (MnO_2) is used for the preparation of _____.

- Ans 1. sodium chromate
2. potassium dichromate
3. potassium permanganate
4. sodium manganate

Question ID : 441009615604
Option 1 ID : 4410092416585
Option 2 ID : 4410092416586
Option 3 ID : 4410092416587
Option 4 ID : 4410092416588

Q.6 The tribal dance form "Karma" is traditionally performed by which community?

- Ans 1. Oraon
2. Apatani
3. Garo
4. Bhil

Question ID : 441009753368
Option 1 ID : 4410092967427
Option 2 ID : 4410092967428
Option 3 ID : 4410092967426
Option 4 ID : 4410092967425

Q.7 The salary and allowances of the Chief Minister of the state are _____.

- Ans 1. Determined by the Pay Commission of the state
2. Determined by the Governor of the state
3. Determined by the Parliament
4. Determined by the State Legislature

Question ID : 441009276085
Option 1 ID : 4410091072469
Option 2 ID : 4410091072467
Option 3 ID : 4410091072468
Option 4 ID : 4410091072466

Q.8 When did the Ahom Revolt unfold in Assam as a resistance to British rule in the region?

- Ans 1. 1830
 2. 1844
 3. 1828
 4. 1834

Question ID : 441009106020
Option 1 ID : 441009422130
Option 2 ID : 441009422132
Option 3 ID : 441009422129
Option 4 ID : 441009422131

Q.9 What was the total value of the five capital acquisition proposals approved by the DAC (Defence Acquisition Committee) on December 3, 2024?

- Ans 1. ₹15,000 Crore
 2. ₹21,772 Crore
 3. ₹25,000 Crore
 4. ₹18,600 Crore

Question ID : 441009207063
Option 1 ID : 441009814195
Option 2 ID : 441009814196
Option 3 ID : 441009814198
Option 4 ID : 441009814197

Q.10 The World Energy Outlook 2025 was released by which organisation?

- Ans 1. International Monetary Fund
 2. International Energy Agency
 3. Organization Petroleum Energy Agency
 4. World Meteorological Organization of Energy

Question ID : 4410091563038
Option 1 ID : 4410096173715
Option 2 ID : 4410096173716
Option 3 ID : 4410096173717
Option 4 ID : 4410096173718

Q.11 Which international organisation published its *Annual Report 2024-2025* and unveiled a *Strategic Plan 2025-2028* in November 2025?

- Ans 1. World Customs Organization
 2. World Health Organization
 3. World Bank
 4. International Labour Organization

Question ID : 4410091563040
Option 1 ID : 4410096173724
Option 2 ID : 4410096173723
Option 3 ID : 4410096173726
Option 4 ID : 4410096173725

Q.12 The Harappan civilization is famous for its well-planned cities. Which of the following features is commonly found in Harappan cities?

- Ans 1. Grid pattern of streets
 2. Circular roads
 3. Random building construction
 4. Elevated platforms

Question ID : 441009749113
Option 1 ID : 4410092950281
Option 2 ID : 4410092950280
Option 3 ID : 4410092950282
Option 4 ID : 4410092950283

Q.13 What was the sex ratio in India as reported in Census 2011?

- Ans 1. 930 females per 1000 males
 2. 943 females per 1000 males
 3. 920 females per 1000 males
 4. 950 females per 1000 males

Question ID : 441009637582
Option 1 ID : 4410092504474
Option 2 ID : 4410092504472
Option 3 ID : 4410092504471
Option 4 ID : 4410092504473

Q.14 When did the NITI Aayog launch the baseline edition of the Multidimensional Poverty Index for India?

- Ans 1. 2022
 2. 2025
 3. 2023
 4. 2021

Question ID : 441009226967
Option 1 ID : 441009888683
Option 2 ID : 441009888685
Option 3 ID : 441009888684
Option 4 ID : 441009888682

Q.15 Who among the following leaders founded the Indian Home Rule Society?

- Ans 1. Lala Lajpat Rai
 2. Mahatma Gandhi
 3. Shyamji Krishna Varma
 4. Motilal Nehru

Question ID : 441009328849
Option 1 ID : 4410091281809
Option 2 ID : 4410091281806
Option 3 ID : 4410091281808
Option 4 ID : 4410091281807

Q.16 The Indian women's national volleyball team secured gold at the 4th CAVA Women's Volleyball Nations League 2024 by winning how many sets in the final match?

- Ans
- 1. 5
 - 2. 3
 - 3. 4
 - 4. 2

Question ID : 441009379057
Option 1 ID : 4410091482056
Option 2 ID : 4410091482054
Option 3 ID : 4410091482055
Option 4 ID : 4410091482053

Q.17 Which of the following schemes of the Government of India provides pensions to poor elderly individuals who lack support from caregivers?

- Ans
- 1. National Social Assistance Programme
 - 2. Mahatma Gandhi National Rural Employment Guarantee Act
 - 3. National Rural Employment Guarantee Scheme
 - 4. Pradhan Mantri Awas Yojana

Question ID : 441009637396
Option 1 ID : 4410092503727
Option 2 ID : 4410092503730
Option 3 ID : 4410092503728
Option 4 ID : 4410092503729

Q.18 During which century was the Quwwat al-Islam mosque and minaret built in Delhi?

- Ans
- 1. Tenth century
 - 2. Twelfth century
 - 3. Eleventh century
 - 4. Fifteenth century

Question ID : 441009205179
Option 1 ID : 441009806939
Option 2 ID : 441009806937
Option 3 ID : 441009806938
Option 4 ID : 441009806940

Q.19 The 'Prime Minister's Employment Generation Programme (PMEGP)' is administered by which of the following Ministries of the Government of India?

- Ans
- 1. Ministry of Micro, Small and Medium Enterprises
 - 2. Ministry of Rural Development
 - 3. Ministry of Labour and Employment
 - 4. Ministry of Home Affairs

Question ID : 441009637570
Option 1 ID : 4410092504423
Option 2 ID : 4410092504425
Option 3 ID : 4410092504426
Option 4 ID : 4410092504424

Q.20 In a food chain, small carnivores or secondary consumers are present in which trophic level?

- Ans
- 1. Trophic level fourth
 - 2. Trophic level first
 - 3. Trophic level second
 - 4. Trophic level third

Question ID : 441009615671
Option 1 ID : 4410092416856
Option 2 ID : 4410092416853
Option 3 ID : 4410092416854
Option 4 ID : 4410092416855

Section : Arithmetical and Numerical Ability

Q.1 Three numbers are in the ratio 4 : 3 : 13 and their LCM is 4524. Their HCF is:

- Ans
- 1. 21
 - 2. 49
 - 3. 29
 - 4. 45

Question ID : 441009525725
Option 1 ID : 4410092058322
Option 2 ID : 4410092058320
Option 3 ID : 4410092058319
Option 4 ID : 4410092058321

Q.2 M and N begin a business partnership. M invests ₹42,000 more than N for 6 months, while N's investment lasts for 5 months. Out of a total profit of ₹1256, M earns ₹314 more than N. Determine the amount invested by M.

- Ans
- 1. ₹149825
 - 2. ₹149823
 - 3. ₹150000
 - 4. ₹149969

Question ID : 441009899590
Option 1 ID : 4410093552433
Option 2 ID : 4410093552431
Option 3 ID : 4410093552430
Option 4 ID : 4410093552432

Q.3 Water flows out through a circular pipe whose internal diameter is 2 cm, at the rate of 6 metres per second into a cylindrical tank, the radius of whose base is 100 cm. By how much will the level of water rise in 15 minutes?

- Ans
- 1. 62 cm
 - 2. 50 cm
 - 3. 54 cm
 - 4. 46 cm

Question ID : 441009600193
Option 1 ID : 4410092355892
Option 2 ID : 4410092355890
Option 3 ID : 4410092355889
Option 4 ID : 4410092355891

Q.4 What is the difference between the average of prime numbers between 40 and 70 and the average of multiples of 2 between 10 and 60?

- Ans
- 1. 26
 - 2. 20
 - 3. 18
 - 4. 13

Question ID : 441009580969
Option 1 ID : 4410092279003
Option 2 ID : 4410092279004
Option 3 ID : 4410092279002
Option 4 ID : 4410092279005

Q.5 A pipe can fill an empty tank in 10 hours. Another pipe can empty the filled tank in 40 hours. If both pipes are opened simultaneously when the tank is empty, how many hours will it take for the tank to be three-fourths full?

- Ans
- 1. 20
 - 2. 10
 - 3. 30
 - 4. 40

Question ID : 441009519288
Option 1 ID : 4410092032572
Option 2 ID : 4410092032571
Option 3 ID : 4410092032574
Option 4 ID : 4410092032573

Q.6 What sum (in ₹) will earn a simple interest of ₹1560 in 3 years at 4% per year rate of interest?

- Ans
- 1. 26000
 - 2. 13000
 - 3. 187.2
 - 4. 6500

Question ID : 441009852639
Option 1 ID : 4410093363530
Option 2 ID : 4410093363528
Option 3 ID : 4410093363531
Option 4 ID : 4410093363529

Q.7 The diagonals of a rhombus shaped field are 360 m and 66 m long. What is the perimeter (in m) of the field?

- Ans
- 1. 749
 - 2. 701
 - 3. 709
 - 4. 732

Question ID : 441009594586
Option 1 ID : 4410092333463
Option 2 ID : 4410092333464
Option 3 ID : 4410092333462
Option 4 ID : 4410092333461

Q.8 Ashish's salary is ₹12,000 per month. He spends ₹5,500 on house rent, ₹2,000 on bills and the rest of the amount is his monthly savings. Find his savings (in ₹) in a year, if in the month of his birthday he spent his complete monthly saving for birthday celebrations.

- Ans
- 1. 45,000
 - 2. 40,500
 - 3. 49,500
 - 4. 54,000

Question ID : 441009209379

Option 1 ID : 441009822801

Option 2 ID : 441009822802

Option 3 ID : 441009822799

Option 4 ID : 441009822800

Q.9 What time (correct to the nearest second) is required for a 268 m long train to cross a 440 m long tunnel, if the train travels at a speed of 17 km/h?

- Ans
- 1. 157
 - 2. 153
 - 3. 150
 - 4. 165

Question ID : 441009125508

Option 1 ID : 441009498878

Option 2 ID : 441009498877

Option 3 ID : 441009498875

Option 4 ID : 441009498876

Q.10 A, B and C started a business on partnership. A invested $\frac{1}{5}$ th of
What is the ratio of shares of profits of A, B and C, respectively?

- Ans
- 1. 3 : 4 : 5
 - 2. 2 : 3 : 5
 - 3. 1 : 3 : 5
 - 4. 3 : 5 : 7

Question ID : 441009202602

Option 1 ID : 441009797112

Option 2 ID : 441009797113

Option 3 ID : 441009797114

Option 4 ID : 441009797111

Q.11 Study the following table and answer the question based on it.

Expenditures of a company (in lakh rupees) per annum over the given years

Year	Item of Expenditure				
	Salary	Fuel and Transport	Bonus	Interest on Loans	Taxes
2001	242	126	292	327	64
2002	284	56	436	201	78
2003	328	100	182	364	60
2004	326	58	237	262	80
2005	332	136	338	444	108

What is the average amount of interest (in lakh rupees) per year which the company had to pay during this period?

- Ans 1. 319.6
 2. 252.1
 3. 287.5
 4. 322.4

Question ID : 441009960920
 Option 1 ID : 4410093797055
 Option 2 ID : 4410093797056
 Option 3 ID : 4410093797058
 Option 4 ID : 4410093797057

Q.12 A teacher has two batches of students. In Batch A, the average score is 84, and in Batch B, the average score is 78. If the number of students in Batch A is twice the number of students in Batch B, what is the combined average score of all students?

- Ans 1. 80
 2. 81
 3. 79
 4. 82

Question ID : 441009208939
 Option 1 ID : 441009821039
 Option 2 ID : 441009821041
 Option 3 ID : 441009821040
 Option 4 ID : 441009821042

Q.13 A shopkeeper claims to sell sugar at the cost price, but he uses a false weight. He gives only 800 g of sugar to the customer while charging for 1 kg. What is his gain percentage?

- Ans 1. 40%
 2. 25%
 3. 30%
 4. 20%

Question ID : 4410091546407
 Option 1 ID : 4410096108506
 Option 2 ID : 4410096108504
 Option 3 ID : 4410096108505
 Option 4 ID : 4410096108503

Q.14 An Uber cab covers a distance of 867 km in 17 hours. What is its speed (in km/hr)?

- Ans
- 1. 60
 - 2. 49
 - 3. 55
 - 4. 51

Question ID : 441009209074
 Option 1 ID : 441009821582
 Option 2 ID : 441009821580
 Option 3 ID : 441009821581
 Option 4 ID : 441009821579

Q.15 Find the cube root of $\frac{0.003375}{0.004913}$.

- Ans
- 1. $\frac{13}{17}$
 - 2. $\frac{17}{15}$
 - 3. $\frac{12}{17}$
 - 4. $\frac{15}{17}$

Question ID : 44100910896
 Option 1 ID : 44100943404
 Option 2 ID : 44100943403
 Option 3 ID : 44100943405
 Option 4 ID : 44100943402

Q.16 A wholesaler offers a trade scheme of "Buy 4, get 1 free" on an article whose marked price is ₹800 per unit. In addition, a cash discount of 10% is allowed on the payable amount after applying the scheme. If a retailer purchases 10 such articles under this offer, then find the effective discount percentage obtained by the retailer on the total marked price.

- Ans
- 1. 27%
 - 2. 30%
 - 3. 28%
 - 4. 29%

Question ID : 4410091622423
 Option 1 ID : 4410096408466
 Option 2 ID : 4410096408465
 Option 3 ID : 4410096408464
 Option 4 ID : 4410096408467

Q.17 A and B can complete a piece of work in 14 days and 24 days respectively. The work left after A has worked alone for 4 days, is

- Ans
- 1. $\frac{13}{7}$
 - 2. $\frac{5}{7}$
 - 3. $\frac{6}{7}$
 - 4. $\frac{1}{7}$

Question ID : 441009913899
 Option 1 ID : 4410093609850
 Option 2 ID : 4410093609847
 Option 3 ID : 4410093609848
 Option 4 ID : 4410093609849

Q.18 Rodney invested ₹57,500 in a bank. In two years how much compound interest (in ₹) will he get, considering annual compounding, if the rate of interest for the first year was 6% per annum and the rate for the second year was 2% per annum more than the first year?

- Ans
- 1. 8,126
 - 2. 7,976
 - 3. 8,326
 - 4. 8,576

Question ID : 441009573216
 Option 1 ID : 4410092247985
 Option 2 ID : 4410092247986
 Option 3 ID : 4410092247984
 Option 4 ID : 4410092247987

Q.19 By selling 24 mangoes for ₹400, a man loses 20%. How many mangoes should he sell for ₹100 so as to gain 20% profit?

- Ans
- 1. 3
 - 2. 2
 - 3. 5
 - 4. 4

Question ID : 441009125507
 Option 1 ID : 441009498872
 Option 2 ID : 441009498871
 Option 3 ID : 441009498874
 Option 4 ID : 441009498873

Q.20 If the radius of a cone is 48 cm and the height is 63 cm, find its volume.

$$\left(\text{Use } \pi = \frac{22}{7} \right)$$

- Ans 1. 1,52,064 cm³
 2. 1,50,624 cm³
 3. 1,50,064 cm³
 4. 1,50,264 cm³

Question ID : 441009125596
 Option 1 ID : 441009499228
 Option 2 ID : 441009499229
 Option 3 ID : 441009499230
 Option 4 ID : 441009499227

Section : English Language and Comprehension

Q.1 Select the option that is the most appropriate antonym of the underlined word in the given sentence.

He displayed an obstinate refusal to compromise on his principles.

- Ans 1. implied
 2. emphatic
 3. compliant
 4. categorical

Question ID : 4410091639710
 Option 1 ID : 4410096476150
 Option 2 ID : 4410096476148
 Option 3 ID : 4410096476149
 Option 4 ID : 4410096476147

Q.2 Choose the correct option to complete the sentence.

The scholarship will cover expenses _____ a maximum of ₹50,000 for each selected student.

- Ans 1. across
 2. apart from
 3. instead of
 4. up to

Question ID : 4410091523892
 Option 1 ID : 4410096018844
 Option 2 ID : 4410096018846
 Option 3 ID : 4410096018845
 Option 4 ID : 4410096018843

Q.3 Parts of a sentence are given below in jumbled order. Arrange the parts in the correct order to form a meaningful sentence.

- (O) in rhythmic beats
- (P) with his cane tapping
- (Q) along the cobbled street
- (R) against the stones
- (S) the old man walked slowly

- Ans
- 1. OPQRS
 - 2. SQPRO
 - 3. POQRS
 - 4. QPORS

Question ID : 441009436219
Option 1 ID : 4410091704395
Option 2 ID : 4410091704394
Option 3 ID : 4410091704396
Option 4 ID : 4410091704397

Q.4 Choose the option that contains the misspelt word.

- Ans
- 1. Conscientious
 - 2. Meticulous
 - 3. Idiosyncrasy
 - 4. Perserverance

Question ID : 4410091526549
Option 1 ID : 4410096029316
Option 2 ID : 4410096029317
Option 3 ID : 4410096029315
Option 4 ID : 4410096029314

Q.5 Choose the correct option to complete the sentence.

The debate focused on the benefits of online learning _____ traditional classroom education.

- Ans
- 1. among
 - 2. across
 - 3. versus
 - 4. besides

Question ID : 4410091523883
Option 1 ID : 4410096018807
Option 2 ID : 4410096018810
Option 3 ID : 4410096018809
Option 4 ID : 4410096018808

Q.6 In the following question a statement has been given with highlighted text. You are required to replace the text with the correct idiom from the given alternatives.

After being cheated by his new business partner once, Mahesh now invests his money very cautiously because he has become overly careful due to a past bad experience.

- Ans
- 1. Look before you leap
 - 2. All that glitters is not gold
 - 3. Once bitten, twice shy
 - 4. A bird in hand is worth two in the bush

Question ID : 4410091264439

Option 1 ID : 4410094990658

Option 2 ID : 4410094990660

Option 3 ID : 4410094990661

Option 4 ID : 4410094990659

Q.7 In the given question, a statement is divided into different segments. The first segment (S1) is fixed, rearrange the other segments to form a coherent statement.

S1. Paper money

- A. making it a form of currency
- B. often referred to as a note or a bill
- C. that is payable to the bearer on demand
- D. is a type of negotiable promissory note

- Ans
- 1. S1-D-B-A-C
 - 2. S1-A-C-D-B
 - 3. S1-C-A-B-D
 - 4. S1-B-D-C-A

Question ID : 4410091524500

Option 1 ID : 4410096021238

Option 2 ID : 4410096021239

Option 3 ID : 4410096021236

Option 4 ID : 4410096021237

Q.8 Choose the correct option to complete the sentence.

Priya's handwriting is very _____.

- Ans
- 1. dusty
 - 2. neat
 - 3. expensive
 - 4. wooden

Question ID : 4410091027297

Option 1 ID : 4410094060746

Option 2 ID : 4410094060744

Option 3 ID : 4410094060745

Option 4 ID : 4410094060747

Q.9 Select the most appropriate article to fill in the blank. If no article is required, select 'No article required'.

She looked out of the window and saw _____ sun setting behind the hills.

- Ans
- 1. an
 - 2. No article required
 - 3. the
 - 4. a

Question ID : 4410091083731
Option 1 ID : 4410094289048
Option 2 ID : 4410094289050
Option 3 ID : 4410094289049
Option 4 ID : 4410094289047

Q.10 Identify the correct proverb that can replace the underlined phrase in the sentence below.

Even though she has many talents, she fails to succeed because she tries to do too many things at the same time and ends up finishing none.

- Ans
- 1. a stitch in time saves nine
 - 2. birds of a feather flock together
 - 3. she is a jack of all trades, master of none
 - 4. actions speak louder than words

Question ID : 4410091127898
Option 1 ID : 4410094447156
Option 2 ID : 4410094447159
Option 3 ID : 4410094447157
Option 4 ID : 4410094447158

Q.11 Select the most appropriate article to fill in the blank. If no article is needed, select 'No article required'.

Roxy is _____ wonderful dog.

- Ans
- 1. the
 - 2. a
 - 3. an
 - 4. No article required

Question ID : 441009498009
Option 1 ID : 4410091947250
Option 2 ID : 4410091947248
Option 3 ID : 4410091947249
Option 4 ID : 4410091947251

Q.12 Select the option that is the most appropriate antonym of the highlighted word in the given sentence.

The tranquil lake was a perfect place for meditation.

- Ans
- 1. defunct
 - 2. muffled
 - 3. roaring
 - 4. sulky

Question ID : 4410091639662
Option 1 ID : 4410096476044
Option 2 ID : 4410096476046
Option 3 ID : 4410096476045
Option 4 ID : 4410096476043

Q.13 Select the most appropriate option that can substitute the underlined words in the given sentence.

He may think over deeply over the fate of empires which have always fallen because of some weakness.

- Ans
- 1. muse
 - 2. accomplish
 - 3. seduce
 - 4. bereave

Question ID : 4410091543759
Option 1 ID : 4410096098111
Option 2 ID : 4410096098110
Option 3 ID : 4410096098113
Option 4 ID : 4410096098112

Q.14 Choose the correctly spelled word that replaces the misspelled word in the sentence below:

The manager's conscientious decision to accommodate the supplication of the differently abled employee surprised the entire committee.

- Ans
- 1. conscientious
 - 2. suplication
 - 3. accomodate
 - 4. comittee

Question ID : 4410091129020
Option 1 ID : 4410094451630
Option 2 ID : 4410094451632
Option 3 ID : 4410094451631
Option 4 ID : 4410094451633

Q.15 Select the option that can be used as a one-word substitute for the given group of words.

A government run by a king or queen

- Ans**
- 1. Democracy
 - 2. Oligarchy
 - 3. Monarchy
 - 4. Republic

Question ID : 441009432447
Option 1 ID : 4410091689306
Option 2 ID : 4410091689309
Option 3 ID : 4410091689308
Option 4 ID : 4410091689307

Comprehension:

Read the given passage and answer the questions that follow.

In the struggle for India's independence, few movements were as powerful as the Salt Satyagraha. Led by Mahatma Gandhi in 1930, this nonviolent protest was a direct challenge to British rule and their oppressive salt laws. At the time, the British controlled the production and taxation of salt, making it illegal for Indians to collect or sell it. This simple necessity became a symbol of colonial exploitation, and Gandhi decided to resist.

On 12 March 1930, Gandhi, along with 78 followers, set out on a 240-mile march from his ashram in Sabarmati to the coastal village of Dandi. As they walked, thousands joined them, transforming the march into a national movement. On 6 April, Gandhi reached the seashore and picked up a handful of salt—defying British law. This act of civil disobedience sparked mass protests across India, with people making and selling salt illegally.

The British responded with brutal force, arresting over 60,000 people, including Gandhi himself. But the movement had already shaken the empire. The Salt Satyagraha proved that nonviolence could be a powerful weapon against oppression and inspired freedom struggles worldwide. It was a turning point in India's journey to independence.

SubQuestion No : 16

Q.16 What was the main objective of the Salt Satyagraha?

- Ans**
- 1. To promote industrial development in India
 - 2. To protest the British control over salt production and taxation
 - 3. To demand the right to vote for Indians
 - 4. To fight for better wages for workers

Question ID : 44100928695
Option 1 ID : 441009114291
Option 2 ID : 441009114292
Option 3 ID : 441009114294
Option 4 ID : 441009114293

Comprehension:

Read the given passage and answer the questions that follow.

In the struggle for India's independence, few movements were as powerful as the Salt Satyagraha. Led by Mahatma Gandhi in 1930, this nonviolent protest was a direct challenge to British rule and their oppressive salt laws. At the time, the British controlled the production and taxation of salt, making it illegal for Indians to collect or sell it. This simple necessity became a symbol of colonial exploitation, and Gandhi decided to resist.

On 12 March 1930, Gandhi, along with 78 followers, set out on a 240-mile march from his ashram in Sabarmati to the coastal village of Dandi. As they walked, thousands joined them, transforming the march into a national movement. On 6 April, Gandhi reached the seashore and picked up a handful of salt—defying British law. This act of civil disobedience sparked mass protests across India, with people making and selling salt illegally.

The British responded with brutal force, arresting over 60,000 people, including Gandhi himself. But the movement had already shaken the empire. The Salt Satyagraha proved that nonviolence could be a powerful weapon against oppression and inspired freedom struggles worldwide. It was a turning point in India's journey to independence.

SubQuestion No : 17

Q.17 What did the British do in response to the Salt Satyagraha?

- Ans
- 1. They ignored the protests and took no action.
 - 2. They allowed Indians to freely produce salt.
 - 3. They immediately lifted the salt tax.
 - 4. They arrested over 60,000 people, including Gandhi.

Question ID : 44100928696
 Option 1 ID : 441009114295
 Option 2 ID : 441009114297
 Option 3 ID : 441009114298
 Option 4 ID : 441009114296

Comprehension:

Read the given passage and answer the questions that follow.

In the struggle for India's independence, few movements were as powerful as the Salt Satyagraha. Led by Mahatma Gandhi in 1930, this nonviolent protest was a direct challenge to British rule and their oppressive salt laws. At the time, the British controlled the production and taxation of salt, making it illegal for Indians to collect or sell it. This simple necessity became a symbol of colonial exploitation, and Gandhi decided to resist.

On 12 March 1930, Gandhi, along with 78 followers, set out on a 240-mile march from his ashram in Sabarmati to the coastal village of Dandi. As they walked, thousands joined them, transforming the march into a national movement. On 6 April, Gandhi reached the seashore and picked up a handful of salt—defying British law. This act of civil disobedience sparked mass protests across India, with people making and selling salt illegally.

The British responded with brutal force, arresting over 60,000 people, including Gandhi himself. But the movement had already shaken the empire. The Salt Satyagraha proved that nonviolence could be a powerful weapon against oppression and inspired freedom struggles worldwide. It was a turning point in India's journey to independence.

SubQuestion No : 18

Q.18 Why did Gandhi pick up salt at Dandi?

- Ans
- 1. To show that salt production was a natural right
 - 2. To express defiance against British salt laws
 - 3. To prove his leadership in the independence movement
 - 4. To set an example for the masses to follow

Question ID : 44100928697
 Option 1 ID : 441009114299
 Option 2 ID : 441009114302
 Option 3 ID : 441009114301
 Option 4 ID : 441009114300

Comprehension:

Read the given passage and answer the questions that follow.

In the struggle for India's independence, few movements were as powerful as the Salt Satyagraha. Led by Mahatma Gandhi in 1930, this nonviolent protest was a direct challenge to British rule and their oppressive salt laws. At the time, the British controlled the production and taxation of salt, making it illegal for Indians to collect or sell it. This simple necessity became a symbol of colonial exploitation, and Gandhi decided to resist.

On 12 March 1930, Gandhi, along with 78 followers, set out on a 240-mile march from his ashram in Sabarmati to the coastal village of Dandi. As they walked, thousands joined them, transforming the march into a national movement. On 6 April, Gandhi reached the seashore and picked up a handful of salt—defying British law. This act of civil disobedience sparked mass protests across India, with people making and selling salt illegally.

The British responded with brutal force, arresting over 60,000 people, including Gandhi himself. But the movement had already shaken the empire. The Salt Satyagraha proved that nonviolence could be a powerful weapon against oppression and inspired freedom struggles worldwide. It was a turning point in India's journey to independence.

SubQuestion No : 19

Q.19 Select the most appropriate ANTONYM of 'oppressive' as used in the passage.

- Ans 1. Just
 2. Cruel
 3. Brutal
 4. Harsh

Question ID : 44100928698
 Option 1 ID : 441009114305
 Option 2 ID : 441009114306
 Option 3 ID : 441009114304
 Option 4 ID : 441009114303

Comprehension:

Read the given passage and answer the questions that follow.

In the struggle for India's independence, few movements were as powerful as the Salt Satyagraha. Led by Mahatma Gandhi in 1930, this nonviolent protest was a direct challenge to British rule and their oppressive salt laws. At the time, the British controlled the production and taxation of salt, making it illegal for Indians to collect or sell it. This simple necessity became a symbol of colonial exploitation, and Gandhi decided to resist.

On 12 March 1930, Gandhi, along with 78 followers, set out on a 240-mile march from his ashram in Sabarmati to the coastal village of Dandi. As they walked, thousands joined them, transforming the march into a national movement. On 6 April, Gandhi reached the seashore and picked up a handful of salt—defying British law. This act of civil disobedience sparked mass protests across India, with people making and selling salt illegally.

The British responded with brutal force, arresting over 60,000 people, including Gandhi himself. But the movement had already shaken the empire. The Salt Satyagraha proved that nonviolence could be a powerful weapon against oppression and inspired freedom struggles worldwide. It was a turning point in India's journey to independence.

SubQuestion No : 20

Q.20 What is the overall tone of the passage?

- Ans 1. Inspirational and reflective
 2. Indifferent and detached
 3. Humorous and lighthearted
 4. Angry and confrontational

Question ID : 44100928699
 Option 1 ID : 441009114308
 Option 2 ID : 441009114307
 Option 3 ID : 441009114310
 Option 4 ID : 441009114309

Section : Hindi Language and Comprehension

Q.1 "शिक्षक _____ छात्रों _____ पाठ पढ़ाया।" रिक्त स्थान की पूर्ति उचित कारक से करें।

- Ans 1. ने, को
 2. पर, को
 3. से, से
 4. को, के

Question ID : 4410091288082
 Option 1 ID : 4410095084186
 Option 2 ID : 4410095084187
 Option 3 ID : 4410095084184
 Option 4 ID : 4410095084185

Q.2 'उतरा घाटी हुआ माटी' लोकोक्ति का सही अर्थ क्या होगा?

- Ans 1. कार्य सम्पन्न हो जाने पर एहसान भूल जाना
 2. पठारों से मैदान में भाग आना
 3. पहाड़ी परिवेश से घृणा करना
 4. पर्वतारोही हो जाना

Question ID : 4410091629456
 Option 1 ID : 4410096435912
 Option 2 ID : 4410096435911
 Option 3 ID : 4410096435913
 Option 4 ID : 4410096435910

Q.3 सभी ने चित्रकार की कला की प्रशंसा की।

वाक्य में प्रयुक्त प्रशंसा शब्द का विलोम क्या है?

- Ans 1. दीर्घकाय
 2. त्याज्य
 3. परिमित
 4. भर्त्सना

Question ID : 4410091626332
 Option 1 ID : 4410096423718
 Option 2 ID : 4410096423720
 Option 3 ID : 4410096423717
 Option 4 ID : 4410096423719

Q.4 निम्नलिखित वाक्य के रेखांकित शब्द का पर्यायवाची कौन-सा नहीं है?

'आज एक महात्मा द्वार पर भिक्षा के लिए आए।'

- Ans 1. महापुरुष
 2. महानुभाव
 3. महाशय
 4. आदमी

Question ID : 4410091530802
 Option 1 ID : 4410096046292
 Option 2 ID : 4410096046294
 Option 3 ID : 4410096046291
 Option 4 ID : 4410096046293

Q.5 निम्नलिखित वाक्य के रिक्त स्थान में उचित क्रिया शब्द का प्रयोग करें -
'राहुल को रोज दूध पड़ता है।'

- Ans 1. पीना
 2. खाना
 3. पी
 4. पीता

Question ID : 4410091241975
 Option 1 ID : 4410094901248
 Option 2 ID : 4410094901251
 Option 3 ID : 4410094901249
 Option 4 ID : 4410094901250

Q.6 उपयुक्त विशेषण का चयन कर वाक्य को पूर्ण कीजिए।
साक्षी काउज्ज्वल है।

- Ans 1. भविष्य
 2. पिछला
 3. पुराना
 4. प्राचीन

Question ID : 4410091300218
 Option 1 ID : 4410095133200
 Option 2 ID : 4410095133199
 Option 3 ID : 4410095133201
 Option 4 ID : 4410095133198

Q.7 निम्नलिखित वाक्य को उचित कारक चिह्न से पूर्ण करें।
'अंशु स्कूल _____ आई है।'

- Ans 1. पर
 2. को
 3. से
 4. के द्वारा

Question ID : 4410091237755
 Option 1 ID : 4410094884549
 Option 2 ID : 4410094884551
 Option 3 ID : 4410094884548
 Option 4 ID : 4410094884550

Q.8 निम्नलिखित वाक्य में रेखांकित शब्द के पर्यायवाची शब्द का चयन दिए गए विकल्पों में से कीजिए-
जंगल में 'मोर' नाचा किसने देखा?

- Ans 1. केकी
 2. पिक
 3. कपोत
 4. अम्बर

Question ID : 4410091618535
 Option 1 ID : 4410096393013
 Option 2 ID : 4410096393012
 Option 3 ID : 4410096393011
 Option 4 ID : 4410096393014

Q.9 दिए गए वाक्यों में से वर्तनी की दृष्टि से शुद्ध वाक्य का चयन कीजिए।

- Ans 1. पूर्णिमा के चाँद देखे।
 2. पूर्णिमा का चाँद देखें।
 3. पुर्णिमा का चाँद देखें।
 4. पूर्णिमा का चाद देखें।

Question ID : 4410091626445
 Option 1 ID : 4410096424154
 Option 2 ID : 4410096424152
 Option 3 ID : 4410096424153
 Option 4 ID : 4410096424155

Q.10 उपयुक्त 'कारक' चिह्न का चयन कर रिक्त स्थान की पूर्ति कीजिए।
 'राहुल साइकिलगिर पड़ा।'

- Ans 1. ने
 2. के
 3. से
 4. में

Question ID : 4410091524734
 Option 1 ID : 4410096022144
 Option 2 ID : 4410096022146
 Option 3 ID : 4410096022145
 Option 4 ID : 4410096022143

Q.11 'घर का दीपक बुझ जाना' मुहावरे का सही अर्थ क्या होगा ?

- Ans 1. निर्वश हो जाना
 2. कलह करना
 3. अलग हो जाना
 4. अमर्यादित व्यवहार करना

Question ID : 4410091629435
 Option 1 ID : 4410096435827
 Option 2 ID : 4410096435828
 Option 3 ID : 4410096435826
 Option 4 ID : 4410096435829

Q.12 निम्नलिखित वाक्य में रेखांकित शब्द के पर्यायवाची शब्द का चयन दिए गए विकल्पों में से कीजिए-
 गर्मियों में 'सूर्य' तपता है।

- Ans 1. हिमांशु
 2. रत्नाकर
 3. सरिता
 4. दिवाकर

Question ID : 4410091618529
 Option 1 ID : 4410096392989
 Option 2 ID : 4410096392987
 Option 3 ID : 4410096392990
 Option 4 ID : 4410096392988

Q.13 दिए गये वाक्यांश के लिए निम्नलिखित विकल्पों में से सार्थक शब्द का चयन करें-
जो ओज एवं तेज से परिपूर्ण हो

- Ans 1. ओंकार
 2. ओजस्वी
 3. ओझल
 4. औरस

Question ID : 4410091291772
Option 1 ID : 4410095099125
Option 2 ID : 4410095099123
Option 3 ID : 4410095099122
Option 4 ID : 4410095099124

Q.14 'जो कठिनाई से मिलता हो'
उपर्युक्त वाक्यांश के लिए एक सार्थक शब्द चुनें -

- Ans 1. दुर्लभ
 2. दुर्भेद्य
 3. कमतर
 4. आसक्त

Question ID : 4410091308951
Option 1 ID : 4410095167457
Option 2 ID : 4410095167456
Option 3 ID : 4410095167455
Option 4 ID : 4410095167454

Q.15 निम्नलिखित वाक्य के रेखांकित शब्द का विलोम बताएं -
'इस कार्य को करने के लिए बहुत परिश्रम की आवश्यकता है।'

- Ans 1. विश्राम
 2. मेहनत
 3. प्रयास
 4. सफलता

Question ID : 4410091530928
Option 1 ID : 4410096046788
Option 2 ID : 4410096046787
Option 3 ID : 4410096046790
Option 4 ID : 4410096046789

Comprehension:

निम्नलिखित गद्यांश के आधार पर प्रश्नों के उत्तर दें -

जिस व्यक्ति के आदर्श¹ उच्च होते हैं, उसके विचार स्वतः ही उच्च हो जाते हैं। उच्च² विचार वाले व्यक्ति ही आगे चलकर विश्व का नेतृत्व कर पाते हैं। अब सबसे बड़ा प्रश्न है कि सादगी वास्तव में है क्या? क्या रहन-सहन और वेशभूषा संबंधी मानक ही सादगी को परिभाषित करने के लिए पर्याप्त हैं? इसका उत्तर है नहीं, क्योंकि इनके आधार³ पर सादगी को समझना काफी नहीं है। ऊपरी तौर पर देखा जाए तो रहन-सहन, खान-पान, पहनावे, कार्य-पद्धति आदि को सादगीपूर्ण जीवन के अंतर्गत शामिल किया जाता है, परंतु सादगी एक व्यापक⁴ विषय है या कहें कि एक प्रकार से जीवन जीने की शैली है। किसी प्रकार के आडंबर⁵ को अपनाए बिना जीवन जीना ही सादगी है, फिर चाहे वह रहन-सहन हो या कार्य-शैली।

SubQuestion No : 16

Q.16 गद्यांश के रेखांकित शब्द 1 का पर्यायवाची नहीं कौन-सा नहीं है?

- Ans
- 1. नमूना
 - 2. मानक
 - 3. प्रतिमान
 - 4. यथार्थ

Question ID : 4410091533766

Option 1 ID : 4410096058233

Option 2 ID : 4410096058231

Option 3 ID : 4410096058234

Option 4 ID : 4410096058232

Comprehension:

निम्नलिखित गद्यांश के आधार पर प्रश्नों के उत्तर दें -

जिस व्यक्ति के आदर्श¹ उच्च होते हैं, उसके विचार स्वतः ही उच्च हो जाते हैं। उच्च² विचार वाले व्यक्ति ही आगे चलकर विश्व का नेतृत्व कर पाते हैं। अब सबसे बड़ा प्रश्न है कि सादगी वास्तव में है क्या? क्या रहन-सहन और वेशभूषा संबंधी मानक ही सादगी को परिभाषित करने के लिए पर्याप्त हैं? इसका उत्तर है नहीं, क्योंकि इनके आधार³ पर सादगी को समझना काफी नहीं है। ऊपरी तौर पर देखा जाए तो रहन-सहन, खान-पान, पहनावे, कार्य-पद्धति आदि को सादगीपूर्ण जीवन के अंतर्गत शामिल किया जाता है, परंतु सादगी एक व्यापक⁴ विषय है या कहें कि एक प्रकार से जीवन जीने की शैली है। किसी प्रकार के आडंबर⁵ को अपनाए बिना जीवन जीना ही सादगी है, फिर चाहे वह रहन-सहन हो या कार्य-शैली।

SubQuestion No : 17

Q.17 गद्यांश के रेखांकित शब्द 2 का विलोम कौन-सा नहीं है?

- Ans
- 1. ऊपर
 - 2. नीचा
 - 3. अनुच्च
 - 4. निम्न

Question ID : 4410091533767

Option 1 ID : 4410096058237

Option 2 ID : 4410096058236

Option 3 ID : 4410096058238

Option 4 ID : 4410096058235

Comprehension:

निम्नलिखित गद्यांश के आधार पर प्रश्नों के उत्तर दें -

जिस व्यक्ति के आदर्श¹ उच्च होते हैं, उसके विचार स्वतः ही उच्च हो जाते हैं। उच्च² विचार वाले व्यक्ति ही आगे चलकर विश्व का नेतृत्व कर पाते हैं। अब सबसे बड़ा प्रश्न है कि सादगी वास्तव में है क्या? क्या रहन-सहन और वेशभूषा संबंधी मानक ही सादगी को परिभाषित करने के लिए पर्याप्त हैं? इसका उत्तर है नहीं, क्योंकि इनके आधार³ पर सादगी को समझना काफी नहीं है। ऊपरी तौर पर देखा जाए तो रहन-सहन, खान-पान, पहनावे, कार्य-पद्धति आदि को सादगीपूर्ण जीवन के अंतर्गत शामिल किया जाता है, परंतु सादगी एक व्यापक⁴ विषय है या कहें कि एक प्रकार से जीवन जीने की शैली है। किसी प्रकार के आडंबर⁵ को अपनाए बिना जीवन जीना ही सादगी है, फिर चाहे वह रहन-सहन हो या कार्य-शैली।

SubQuestion No : 18

Q.18 गद्यांश के रेखांकित शब्द 3 का पर्यायवाची कौन-सा नहीं है?

- Ans
- 1. अवलंब
 - 2. नूतन
 - 3. बुनियाद
 - 4. सहारा

Question ID : 4410091533768

Option 1 ID : 4410096058239

Option 2 ID : 4410096058242

Option 3 ID : 4410096058241

Option 4 ID : 4410096058240

Comprehension:

निम्नलिखित गद्यांश के आधार पर प्रश्नों के उत्तर दें -

जिस व्यक्ति के आदर्श¹ उच्च होते हैं, उसके विचार स्वतः ही उच्च हो जाते हैं। उच्च² विचार वाले व्यक्ति ही आगे चलकर विश्व का नेतृत्व कर पाते हैं। अब सबसे बड़ा प्रश्न है कि सादगी वास्तव में है क्या? क्या रहन-सहन और वेशभूषा संबंधी मानक ही सादगी को परिभाषित करने के लिए पर्याप्त हैं? इसका उत्तर है नहीं, क्योंकि इनके आधार³ पर सादगी को समझना काफी नहीं है। ऊपरी तौर पर देखा जाए तो रहन-सहन, खान-पान, पहनावे, कार्य-पद्धति आदि को सादगीपूर्ण जीवन के अंतर्गत शामिल किया जाता है, परंतु सादगी एक व्यापक⁴ विषय है या कहें कि एक प्रकार से जीवन जीने की शैली है। किसी प्रकार के आडंबर⁵ को अपनाए बिना जीवन जीना ही सादगी है, फिर चाहे वह रहन-सहन हो या कार्य-शैली।

SubQuestion No : 19

Q.19 गद्यांश के रेखांकित शब्द 4 का अर्थ कौन-सा है ?

- Ans
- 1. संकुचित
 - 2. सिकुड़ना
 - 3. फैला हुआ
 - 4. अविस्तृत

Question ID : 4410091533769

Option 1 ID : 4410096058245

Option 2 ID : 4410096058246

Option 3 ID : 4410096058243

Option 4 ID : 4410096058244

Comprehension:

निम्नलिखित गद्यांश के आधार पर प्रश्नों के उत्तर दें -

जिस व्यक्ति के आदर्श¹ उच्च होते हैं, उसके विचार स्वतः ही उच्च हो जाते हैं। उच्च² विचार वाले व्यक्ति ही आगे चलकर विश्व का नेतृत्व कर पाते हैं। अब सबसे बड़ा प्रश्न है कि सादगी वास्तव में है क्या? क्या रहन-सहन और वेशभूषा संबंधी मानक ही सादगी को परिभाषित करने के लिए पर्याप्त हैं? इसका उत्तर है नहीं, क्योंकि इनके आधार³ पर सादगी को समझना काफी नहीं है। ऊपरी तौर पर देखा जाए तो रहन-सहन, खान-पान, पहनावे, कार्य-पद्धति आदि को सादगीपूर्ण जीवन के अंतर्गत शामिल किया जाता है, परंतु सादगी एक व्यापक⁴ विषय है या कहें कि एक प्रकार से जीवन जीने की शैली है। किसी प्रकार के आडंबर⁵ को अपनाए बिना जीवन जीना ही सादगी है, फिर चाहे वह रहन-सहन हो या कार्य-शैली।

SubQuestion No : 20

Q.20 गद्यांश के रेखांकित शब्द 5 का विलोम बताएं -

- Ans
- 1. बनावट
 - 2. अनावश्यक
 - 3. दिखावा
 - 4. सादगी

Question ID : 4410091533770

Option 1 ID : 4410096058249

Option 2 ID : 4410096058250

Option 3 ID : 4410096058247

Option 4 ID : 4410096058248

Section : Discipline 1

Q.1 Which activity best demonstrates fine motor development in young children?

- Ans
- 1. Kicking a ball
 - 2. Tying shoelaces
 - 3. Jumping rope
 - 4. Running

Question ID : 4410091683353

Option 1 ID : 4410096640338

Option 2 ID : 4410096640340

Option 3 ID : 4410096640341

Option 4 ID : 4410096640339

Q.2 शांति शिक्षा का प्राथमिक फोकस क्या है?

- Ans
- 1. आर्थिक संवृद्धि
 - 2. पाठ्यचर्या मूल्यांकन
 - 3. संघर्ष का विस्तार
 - 4. सद्भाव को बढ़ावा देना

Question ID : 4410091628260

Option 1 ID : 4410096431212

Option 2 ID : 4410096431213

Option 3 ID : 4410096431211

Option 4 ID : 4410096431210

Q.3 भारत के संविधान की उद्देशिका में "सामाजिक, आर्थिक और राजनैतिक न्याय" वाक्यांश का प्राथमिक उद्देश्य किसके लिए एक रूपरेखा स्थापित करना है?

- Ans
- 1. प्रत्येक व्यक्ति के लिए समान परिणामों की गारंटी देना
 - 2. लोगों के बीच धार्मिक समरूपता को बढ़ावा देना
 - 3. एक कल्याणकारी राज्य की स्थापना करना और संरचनात्मक विषमताओं को दूर करना
 - 4. समाज के सभी नागरिकों के बीच समान धन वितरण बनाए रखना

Question ID : 4410091543061
Option 1 ID : 4410096095295
Option 2 ID : 4410096095294
Option 3 ID : 4410096095293
Option 4 ID : 4410096095292

Q.4 In a 5-year-old child who demonstrates proficient tower-building with blocks but exhibits difficulties catching a ball, this discrepancy most likely reflects which of the following?

- Ans
- 1. Delays in both gross and fine motor skill domains
 - 2. Typical uneven development across distinct motor skill areas
 - 3. Deficiency in symbolic reasoning capacity
 - 4. Delay in cognitive and language abilities

Question ID : 4410091541867
Option 1 ID : 4410096090635
Option 2 ID : 4410096090636
Option 3 ID : 4410096090638
Option 4 ID : 4410096090637

Q.5 Educational Sociology is mainly concerned with the systematic study of:

- Ans
- 1. Economic growth and national development
 - 2. Administrative and political control of educational systems
 - 3. Social activities, institutions, and processes influencing education
 - 4. Individual psychological development of learners

Question ID : 4410091616933
Option 1 ID : 4410096386646
Option 2 ID : 4410096386647
Option 3 ID : 4410096386645
Option 4 ID : 4410096386644

Q.6 What did the Preamble of the Indian Constitution declare India to be?

- Ans
- 1. Socialist, Secular, Democratic Republic
 - 2. Sovereign, Socialist, Democratic Nation
 - 3. Unitary, Parliamentary, Constitutional State
 - 4. Federal, Secular, Republican Government

Question ID : 4410091546774
Option 1 ID : 4410096109964
Option 2 ID : 4410096109966
Option 3 ID : 4410096109965
Option 4 ID : 4410096109967

Q.7 During adolescence, which social development is most prominent?

- Ans
- 1. Developing trust
 - 2. Working in teams
 - 3. Building attachment
 - 4. Forming a sense of identity

Question ID : 4410091600265

Option 1 ID : 4410096320748

Option 2 ID : 4410096320749

Option 3 ID : 4410096320747

Option 4 ID : 4410096320750

Q.8 A curriculum designer is selecting age-appropriate activities for 6-8-year-old children. Which combination best reflects their typical motor abilities?

- Ans
- 1. Drawing person with 2 body parts and crawling
 - 2. Riding a bicycle and tying shoelaces loosely
 - 3. Standing unsupported and stacking 2 blocks
 - 4. Keyboard proficiency and intricate crafts

Question ID : 4410091628269

Option 1 ID : 4410096431247

Option 2 ID : 4410096431246

Option 3 ID : 4410096431248

Option 4 ID : 4410096431249

Q.9 Which approach best integrates peace education into the curriculum for long-term student transformation?

- Ans
- 1. Conducting annual peace rallies
 - 2. Offering peace education only as an extracurricular activity
 - 3. Focusing solely on conflict resolution workshops
 - 4. Embedding peace values across all subjects and activities

Question ID : 4410091608094

Option 1 ID : 4410096351311

Option 2 ID : 4410096351308

Option 3 ID : 4410096351309

Option 4 ID : 4410096351310

Q.10 Which statement best captures the role of culture in socialization?

- Ans
- 1. Culture functions independently of social processes
 - 2. Culture provides the framework
 - 3. Culture changes only through biological adaptation
 - 4. Culture is irrelevant to learning social norms

Question ID : 4410091572444

Option 1 ID : 4410096210713

Option 2 ID : 4410096210714

Option 3 ID : 4410096210715

Option 4 ID : 4410096210712

Q.11 What does the term 'Secular' in the Preamble signify for the Indian state?

- Ans
- 1. State treats religions equally.
 - 2. The state follows a single religion.
 - 3. The state promotes only indigenous religions.
 - 4. The state restricts religious freedom.

Question ID : 4410091611259
Option 1 ID : 4410096363892
Option 2 ID : 4410096363891
Option 3 ID : 4410096363894
Option 4 ID : 4410096363893

Q.12 According to Kohlberg's theory, which stage is characterized by children obeying rules to avoid punishment?

- Ans
- 1. Autonomous stage
 - 2. Pre-conventional stage
 - 3. Conventional stage
 - 4. Post-conventional stage

Question ID : 4410091604082
Option 1 ID : 4410096335517
Option 2 ID : 4410096335514
Option 3 ID : 4410096335515
Option 4 ID : 4410096335516

Q.13 Which of the following best exemplifies a learner-centered approach in curriculum development?

- Ans
- 1. Preparing learners primarily for social roles and responsibilities
 - 2. Organising content mainly around traditional subjects
 - 3. Delivering fixed content with standardised assessments
 - 4. Shaping lessons by student interests and involvement

Question ID : 4410091543199
Option 1 ID : 4410096095838
Option 2 ID : 4410096095836
Option 3 ID : 4410096095839
Option 4 ID : 4410096095837

Q.14 Which aspect most significantly characterizes the hierarchical structure of Indian society?

- Ans
- 1. Religious uniformity across regions
 - 2. Linguistic plurality as the sole determinant
 - 3. Complete cultural homogeneity
 - 4. Caste and class divisions are deeply embedded.

Question ID : 4410091630676
Option 1 ID : 4410096440852
Option 2 ID : 4410096440850
Option 3 ID : 4410096440853
Option 4 ID : 4410096440851

Q.15 A middle school student begins questioning family beliefs after discussions with friends and adapts some of his views based on peer suggestions. What does this scenario best represent in the context of social and emotional development?

- Ans
- 1. Attachment behavior in infancy.
 - 2. Empathy development in toddlerhood.
 - 3. Peer influence on beliefs in middle childhood.
 - 4. Initiative in group play during preschool years.

Question ID : 4410091682579
Option 1 ID : 4410096637570
Option 2 ID : 4410096637571
Option 3 ID : 4410096637572
Option 4 ID : 4410096637573

Q.16 Which of the following is not a principle of development?

- Ans
- 1. Continuity
 - 2. Sequentially
 - 3. Specific to general
 - 4. Differentiability

Question ID : 4410091544042
Option 1 ID : 4410096099267
Option 2 ID : 4410096099268
Option 3 ID : 4410096099269
Option 4 ID : 4410096099270

Q.17 How does the principle of justice in the Preamble influence educational policies in India?

- Ans
- 1. It restricts education to only certain social groups
 - 2. It mandates religious instruction as compulsory in all schools
 - 3. It prioritizes military training over academic education
 - 4. It encourages equal opportunities for all students regardless of background

Question ID : 4410091624540
Option 1 ID : 4410096416697
Option 2 ID : 4410096416696
Option 3 ID : 4410096416698
Option 4 ID : 4410096416695

Q.18 In a classroom where students from diverse backgrounds learn together, which constitutional value is most directly promoted?

- Ans
- 1. Sovereignty
 - 2. Fraternity
 - 3. Equality
 - 4. Liberty

Question ID : 4410091627926
Option 1 ID : 4410096429891
Option 2 ID : 4410096429893
Option 3 ID : 4410096429892
Option 4 ID : 4410096429890

Q.19 According to Piaget's theory, which stage is characterized by the development of object permanence?

- Ans
- 1. Concrete operational stage
 - 2. Sensorimotor stage
 - 3. Formal operational stage
 - 4. Preoperational stage

Question ID : 4410091692304
Option 1 ID : 4410096675318
Option 2 ID : 4410096675316
Option 3 ID : 4410096675319
Option 4 ID : 4410096675317

Q.20 Which of the following was a primary recommendation of the University Education Commission (Radha Krishnan Commission) of 1948-49 regarding university education in India?

- Ans
- 1. Emphasizing teaching and research to promote national development
 - 2. Introducing compulsory vocational training at the school level
 - 3. Centralizing all universities under direct central control
 - 4. Making university education free for all enrolled students

Question ID : 4410091624653
Option 1 ID : 4410096417143
Option 2 ID : 4410096417144
Option 3 ID : 4410096417146
Option 4 ID : 4410096417145

Section : Discipline2

Q.1 Which of the following best describes a common pattern of behaviour in groups?

- Ans
- 1. Everyone works separately with no interaction
 - 2. Members often share roles and responsibilities
 - 3. Only one person makes all decisions
 - 4. Members avoid communicating with each other

Question ID : 4410091607893
Option 1 ID : 4410096350517
Option 2 ID : 4410096350519
Option 3 ID : 4410096350516
Option 4 ID : 4410096350518

Q.2 What is the key purpose of peer tutoring in the classroom?

- Ans
- 1. Students read silently without discussion
 - 2. Students listen passively to the teacher
 - 3. Students help each other understand concepts
 - 4. Students work individually without interaction

Question ID : 4410091542416
Option 1 ID : 4410096092770
Option 2 ID : 4410096092769
Option 3 ID : 4410096092767
Option 4 ID : 4410096092768

Q.3 The maxim "From Concrete to Abstract" is most effective because concrete experiences:

- Ans**
- 1. Appeal to sensory understanding and remain longer in memory
 - 2. Reduce the need for physical materials in early grades
 - 3. Make abstract thinking unnecessary in higher classes
 - 4. Promote imagination without the need for real objects

Question ID : 4410091572376
 Option 1 ID : 4410096210492
 Option 2 ID : 4410096210494
 Option 3 ID : 4410096210495
 Option 4 ID : 4410096210493

Q.4 A preschool child learns new words naturally by listening and interacting during play. This is an example of:

- Ans**
- 1. Rote-memorization through reading the content
 - 2. Language acquisition in pre-school years
 - 3. Drilling of vocabulary
 - 4. Formal grammar instruction

Question ID : 4410091568346
 Option 1 ID : 4410096194669
 Option 2 ID : 4410096194670
 Option 3 ID : 4410096194671
 Option 4 ID : 4410096194668

Q.5 Which of the following steps comes first when preparing a lesson plan?

- Ans**
- 1. Conducting classroom activities
 - 2. Selecting teaching aids
 - 3. Identifying learning objectives
 - 4. Evaluating student performance

Question ID : 4410091650766
 Option 1 ID : 4410096519181
 Option 2 ID : 4410096519179
 Option 3 ID : 4410096519178
 Option 4 ID : 4410096519180

Q.6 A curriculum committee is revising science instruction to better reflect the evolving nature of pedagogy. Which modification would most accurately apply contemporary concepts of pedagogical practice to real classroom settings?

- Ans**
- 1. Imposing fixed instructional frameworks independent of learner development patterns
 - 2. Restricting experimental work to standardized procedures outlined in official manuals
 - 3. Embedding adaptive, inquiry-driven investigations responsive to emergent student reasoning
 - 4. Maintaining uniform reliance on traditionally codified instructional sequences

Question ID : 4410091638065
 Option 1 ID : 4410096469857
 Option 2 ID : 4410096469856
 Option 3 ID : 4410096469855
 Option 4 ID : 4410096469854

Q.7 A study examining Mindfulness-Based Stress Reduction (MBSR) for secondary teachers showed significant stress reduction. Which MBSR process component is primarily applied to transform impulsive reactivity?

- Ans
- 1. Focusing attention regulation
 - 2. Developing bodily awareness skills
 - 3. Enhancing emotional regulation
 - 4. Transforming static self-perception

Question ID : 4410091549864
Option 1 ID : 4410096122143
Option 2 ID : 4410096122145
Option 3 ID : 4410096122144
Option 4 ID : 4410096122146

Q.8 What is a key characteristic of the preoperational stage in Piaget's theory related to mathematics learning?

- Ans
- 1. Children perform complex mental calculations
 - 2. Children think abstractly about numbers
 - 3. Children use symbols but struggle with logical operations
 - 4. Children easily understand conservation of number

Question ID : 4410091704590
Option 1 ID : 4410096723421
Option 2 ID : 4410096723420
Option 3 ID : 4410096723419
Option 4 ID : 4410096723418

Q.9 How does the preamble to the Constitution of UNESCO relate to the role of education in shaping society's mindset?

- Ans
- 1. It recommends military alliances among nations
 - 2. It emphasizes constructing peace in minds through education
 - 3. It mandates economic reforms for world unity
 - 4. It focuses on technological advancement for all

Question ID : 4410091643183
Option 1 ID : 4410096489583
Option 2 ID : 4410096489580
Option 3 ID : 4410096489581
Option 4 ID : 4410096489582

Q.10 How can including family input enhance the comprehensive assessment of a child's language and early literacy development?

- Ans
- 1. Family replaces the teacher's role in assessment
 - 2. Family input provides context beyond school experiences
 - 3. Family focuses only on correcting the child's language mistakes
 - 4. Family has more knowledge about language learning

Question ID : 4410091623607
Option 1 ID : 4410096413013
Option 2 ID : 4410096413012
Option 3 ID : 4410096413015
Option 4 ID : 4410096413014

Q.11 A pre-school teacher records a 4-year-old saying "I runned fast" but correctly saying "She brought the flowers". This consistent grammatical deviation primarily indicates the child is engaging in:

- Ans
- 1. Responding to positive reinforcement
 - 2. Imitating adult speech models
 - 3. Selective memory retention failure
 - 4. Applying productive morpheme rules

Question ID : 4410091550516

Option 1 ID : 4410096124526

Option 2 ID : 4410096124523

Option 3 ID : 4410096124524

Option 4 ID : 4410096124525

Q.12 Priya, a student-teacher, notices that over several weeks of journaling, her entries reveal a shift from self-doubt to increased confidence in her teaching abilities. Which aspect of reflective journal writing is illustrated in Priya's experience?

- Ans
- 1. Developmental nature shown over time
 - 2. Immediate emotional expression
 - 3. One-time incident analysis
 - 4. Focus on external feedback

Question ID : 4410091606156

Option 1 ID : 4410096343649

Option 2 ID : 4410096343648

Option 3 ID : 4410096343651

Option 4 ID : 4410096343650

Q.13 Which of the following options best demonstrates the application of 'learning to observe' in enhancing self-understanding during group interactions?

- Ans
- 1. Observing others' body language to predict their responses
 - 2. Observing and reflecting on own emotions
 - 3. Listening carefully to others' opinions without personal reflection
 - 4. Focusing on achieving group objectives without distraction

Question ID : 4410091608212

Option 1 ID : 4410096351775

Option 2 ID : 4410096351773

Option 3 ID : 4410096351772

Option 4 ID : 4410096351774

Q.14 Bloom's Evaluation approach shifts planning emphasis from content flow to what central focus?

- Ans
- 1. Objective-centered teaching structure.
 - 2. Content knowledge memorization.
 - 3. Previous experience assimilation.
 - 4. Flexible resource incorporation.

Question ID : 4410091557323

Option 1 ID : 4410096151751

Option 2 ID : 4410096151750

Option 3 ID : 4410096151752

Option 4 ID : 4410096151753

Q.15 What is a primary benefit of encouraging multilingualism in early childhood education?

- Ans
- 1. It eliminates the need for assessment in schools.
 - 2. It makes learning mathematics easier for all students.
 - 3. It promotes cognitive flexibility and cultural understanding.
 - 4. It ensures all children speak only the national language.

Question ID : 4410091641510
 Option 1 ID : 4410096483153
 Option 2 ID : 4410096483152
 Option 3 ID : 4410096483151
 Option 4 ID : 4410096483154

Q.16 What is the primary change in the teacher's role when using multilingualism as a resource?

- Ans
- 1. The teacher becomes the sole authority and knowledge-giver
 - 2. The teacher acts as an observer, facilitator, and learner
 - 3. The teacher eliminates the use of textbooks entirely
 - 4. The teacher only focuses on correcting errors

Question ID : 4410091572383
 Option 1 ID : 4410096210520
 Option 2 ID : 4410096210521
 Option 3 ID : 4410096210523
 Option 4 ID : 4410096210522

Q.17 What is the primary purpose of maintaining reflective journals for teachers?

- Ans
- 1. To compile lesson plans for future classroom use
 - 2. To document student behaviour and discipline issues
 - 3. To monitor professional growth and self-development
 - 4. To record daily classroom events in detail

Question ID : 4410091681570
 Option 1 ID : 4410096633661
 Option 2 ID : 4410096633660
 Option 3 ID : 4410096633658
 Option 4 ID : 4410096633659

Q.18 When examining the contemporary relevance of an iconic cultural figure, which factor is most important in understanding their sustained influence on society?

- Ans
- 1. The adaptability of their ideals to current issues
 - 2. The strict preservation of original customs
 - 3. The absence of critique in modern discussions
 - 4. The number of statues built in their honor

Question ID : 4410091678960
 Option 1 ID : 4410096624049
 Option 2 ID : 4410096624051
 Option 3 ID : 4410096624052
 Option 4 ID : 4410096624050

Q.19 In a multicultural society, a curriculum designer aims to enhance social cohesion by leveraging socialization. Which strategy most effectively addresses both the transmission of shared values and adaptation to diverse cultural backgrounds?

- Ans 1. Incorporating collaborative projects and intercultural peer interactions into lessons
2. Emphasizing subject-specific content without group activities
3. Focusing on teacher-centered lectures and standardized testing methods
4. Integrating national symbols and traditional stories into textbooks

Question ID : 4410091630349

Option 1 ID : 4410096439546

Option 2 ID : 4410096439549

Option 3 ID : 4410096439548

Option 4 ID : 4410096439547

Q.20 Why are bilingual children reported to have a smaller number of words in each language compared to monolinguals?

- Ans 1. Because they have limited cognitive capacity.
2. Because their vocabulary is distributed across two languages.
3. Because they learn fewer words overall.
4. Because they struggle with language development.

Question ID : 4410091654386

Option 1 ID : 4410096532555

Option 2 ID : 4410096532553

Option 3 ID : 4410096532554

Option 4 ID : 4410096532552

Section : Discipline3

Q.1 Which concept is defined as a social system where power is historically held by males, systematically disadvantaging women, and perpetuating unequal social relations?

- Ans 1. Matrilineal descent
2. Egalitarian principle
3. Matriarchal structure
4. Patriarchal system

Question ID : 4410091558756

Option 1 ID : 4410096157413

Option 2 ID : 4410096157416

Option 3 ID : 4410096157414

Option 4 ID : 4410096157415

Q.2 While finalizing a policy document, a team member writes, 'Employees should ensure he completes the training.' Which alternative best aligns with both grammatical correctness and modern appropriateness for professional communication?

- Ans 1. Employees should ensure they complete the training.
2. Each employee should ensure they completes the training.
3. All employees should ensure he completes the training.
4. Employees should ensure he completes the training.

Question ID : 4410091628653
 Option 1 ID : 4410096432758
 Option 2 ID : 4410096432760
 Option 3 ID : 4410096432761
 Option 4 ID : 4410096432759

Q.3 Why is it important for teachers to recognize their own biases before entering the classroom?

- Ans 1. To improve mastery of subject content
2. To prevent reinforcing social prejudices
3. To maintain classroom discipline
4. To speed up lesson planning

Question ID : 4410091682942
 Option 1 ID : 4410096639022
 Option 2 ID : 4410096639025
 Option 3 ID : 4410096639023
 Option 4 ID : 4410096639024

Q.4 How does the concept of readiness affect children's learning in elementary classrooms?

- Ans 1. Children learn best when they are developmentally prepared
2. Children learn best when forced to memorize information quickly
3. Children learn best when given only theoretical instruction
4. Children learn best when they imitate their classmates

Question ID : 4410091641766
 Option 1 ID : 4410096484137
 Option 2 ID : 4410096484138
 Option 3 ID : 4410096484139
 Option 4 ID : 4410096484140

Q.5 In linguistic research on vocabulary acquisition, what fundamentally distinguishes active vocabulary from passive vocabulary in terms of depth of knowledge required for effective use?

- Ans 1. Passive vocabulary prioritizes rote memorization for output whereas active focuses solely on receptive exposure without productive application demands
2. Both types equally emphasize immediate retrieval speed, differing only in frequency of auditory input rather than engagement level or skill application
3. Active vocabulary demands minimal contextual recognition while passive requires exhaustive recall for spontaneous production in varied communicative scenarios
4. Active vocabulary involves confident production in speech or writing with full mastery of meaning, usage, and pronunciation beyond mere comprehension

Question ID : 4410091560904
 Option 1 ID : 4410096165828
 Option 2 ID : 4410096165829
 Option 3 ID : 4410096165826
 Option 4 ID : 4410096165827

Q.6 What is a key feature of the lecture method of teaching mathematics?

- Ans
- 1. Students conduct experiments
 - 2. Students play mathematical games
 - 3. Students actively participate
 - 4. Students remain passive listeners

Question ID : 4410091682251
Option 1 ID : 4410096636304
Option 2 ID : 4410096636305
Option 3 ID : 4410096636302
Option 4 ID : 4410096636303

Q.7 How does an Advanced Teacher differ from a Proficient Teacher, according to the National Professional Standards for Teachers?

- Ans
- 1. Advanced Teachers have minimal interaction with other stakeholders
 - 2. Advanced Teachers do not prefer to reflect on learner contexts
 - 3. Advanced Teachers apply new curricular content to address diverse needs
 - 4. Advanced Teachers focus mainly on textbook and syllabus completion

Question ID : 4410091609062
Option 1 ID : 4410096355166
Option 2 ID : 4410096355167
Option 3 ID : 4410096355164
Option 4 ID : 4410096355165

Q.8 In pedagogical leadership, who primarily fosters positive school culture?

- Ans
- 1. School leader
 - 2. Student council
 - 3. Instructional coach
 - 4. Administrative staff

Question ID : 4410091635101
Option 1 ID : 4410096458445
Option 2 ID : 4410096458446
Option 3 ID : 4410096458443
Option 4 ID : 4410096458444

Q.9 When building a school from scratch, why is teacher identity important for shaping school culture?

- Ans
- 1. Models values and behaviors
 - 2. Teacher identity requires the use of uniforms
 - 3. Teacher identity sets the school timetable
 - 4. Teacher identity determines classroom size

Question ID : 4410091606816
Option 1 ID : 4410096346249
Option 2 ID : 4410096346250
Option 3 ID : 4410096346251
Option 4 ID : 4410096346248

Q.10 A teacher designs a lesson where students solve problems collaboratively, considering each learner's background and abilities. Which principle of effective pedagogy is best demonstrated here?

- Ans**
- 1. Relying on student self-efficacy alone
 - 2. Differentiation based on multiple learning factors
 - 3. Exclusive focus on environmental resources
 - 4. Uniform instruction for all students

Question ID : 4410091683642
 Option 1 ID : 4410096641497
 Option 2 ID : 4410096641495
 Option 3 ID : 4410096641494
 Option 4 ID : 4410096641496

Q.11 निम्नलिखित में से कौन-सा कथन, शास्त्रीय अनुबंधन को प्रयास-और-त्रुटि अधिगम से सही तरह से अलग करता है?

- Ans**
- 1. शास्त्रीय अनुबंधन में त्रुटियों को सुधारने के लिए चेतन तर्क की आवश्यकता होती है, जबकि प्रयास-और-त्रुटि में स्वचालित प्रतिवर्त शामिल हैं।
 - 2. शास्त्रीय अनुबंधन लक्ष्यों को प्राप्त करने के लिए स्वैच्छिक क्रियाओं पर निर्भर करता है, जबकि प्रयास-और-त्रुटि पूर्णतः प्रतिवर्ती अनुक्रिया है।
 - 3. शास्त्रीय अनुबंधन में उद्दीपन के बीच संबंध स्थापित करना शामिल होता है, जबकि प्रयास-और-त्रुटि किसी समस्या को हल करने के लिए बार-बार प्रयास करने पर निर्भर होता है।
 - 4. शास्त्रीय अनुबंधन तथा प्रयास-और-त्रुटि अधिगम का उपागम एकसमान है और इनके अनुप्रयोग में कोई अंतर नहीं है।

Question ID : 4410091546563
 Option 1 ID : 4410096109133
 Option 2 ID : 4410096109132
 Option 3 ID : 4410096109131
 Option 4 ID : 4410096109134

Q.12 Which outcome best reflects the goal of developing a positive attitude toward mathematics in primary school?

- Ans**
- 1. A student avoids asking questions
 - 2. A student memorizes all formulas
 - 3. A student enjoys learning math
 - 4. A student always finishes math homework first

Question ID : 4410091695549
 Option 1 ID : 4410096688200
 Option 2 ID : 4410096688199
 Option 3 ID : 4410096688197
 Option 4 ID : 4410096688198

Q.13 Mr. Singh incorporates play-based, multilingual activities in his primary classroom, as recommended by NEP 2020. Which aspect of his professional responsibilities is he most directly addressing?

- Ans**
- 1. He is prioritizing administrative duties over classroom engagement.
 - 2. He is limiting his role to delivering lectures without interaction.
 - 3. He is promoting equity and adapting instruction to meet diverse learner needs.
 - 4. He is enforcing uniform teaching strategies for all students regardless of background.

Question ID : 4410091607577
 Option 1 ID : 4410096349279
 Option 2 ID : 4410096349278
 Option 3 ID : 4410096349276
 Option 4 ID : 4410096349277

Q.14 A student attempts several ways to arrange blocks to form a stable tower. After multiple failed attempts, the child finally discovers a balanced structure. This learning reflects:

- Ans**
- 1. Classical learning
 - 2. Insight learning
 - 3. Trial-and-error learning
 - 4. Observational learning

Question ID : 4410091546997
Option 1 ID : 4410096110860
Option 2 ID : 4410096110858
Option 3 ID : 4410096110859
Option 4 ID : 4410096110861

Q.15 If a student understands the word 'meticulous' when reading but never uses it while speaking, in which vocabulary is it included?

- Ans**
- 1. Technical vocabulary
 - 2. Academic vocabulary
 - 3. Active vocabulary
 - 4. Passive vocabulary

Question ID : 4410091621171
Option 1 ID : 4410096403492
Option 2 ID : 4410096403490
Option 3 ID : 4410096403489
Option 4 ID : 4410096403491

Q.16 A teacher encourages students to find multiple solutions to one problem. This develops:

- Ans**
- 1. Rote memorization
 - 2. Learning long definitions
 - 3. Developing reasoning
 - 4. Avoiding concrete materials

Question ID : 4410091568368
Option 1 ID : 4410096194756
Option 2 ID : 4410096194758
Option 3 ID : 4410096194757
Option 4 ID : 4410096194759

Q.17 What does the suffix battle between '-ise' and '-ize' illustrate about English spelling?

- Ans**
- 1. The role of dictionaries in standardizing language
 - 2. The lack of absolutes in English language rules
 - 3. The influence of style guides on spelling
 - 4. The emergence of American English spellings

Question ID : 4410091655228
Option 1 ID : 4410096535880
Option 2 ID : 4410096535879
Option 3 ID : 4410096535877
Option 4 ID : 4410096535878

Q.18 According to the teacher's roles, rights, and responsibilities in the modern context, how does a teacher contribute to raising awareness about community health?

- Ans
- 1. Restricting communication with parents and family about health
 - 2. Focusing only on examination preparation and academic achievement
 - 3. Limiting teaching responsibilities strictly to classroom academic instruction
 - 4. Teachers can provide information to students and parents on how to stay healthy

Question ID : 4410091603869
Option 1 ID : 4410096334665
Option 2 ID : 4410096334667
Option 3 ID : 4410096334664
Option 4 ID : 4410096334666

Q.19 Which role of a teacher involves analysing one's own teaching practices, experimenting with new methods, and continuously trying to improve professional skills?

- Ans
- 1. Teacher as an Evaluator
 - 2. Teacher as a Reflective Professional
 - 3. Teacher as a Model
 - 4. Teacher as a Counsellor

Question ID : 4410091579448
Option 1 ID : 4410096239088
Option 2 ID : 4410096239087
Option 3 ID : 4410096239086
Option 4 ID : 4410096239085

Q.20 What is the main focus of Pedagogical leadership in schools?

- Ans
- 1. Managing school finances and maintaining the physical infrastructure only
 - 2. Supervising administrative staff without involvement in classroom teaching
 - 3. Improving teaching practices and enhancing student learning outcomes effectively
 - 4. Organizing school events and extracurricular activities exclusively

Question ID : 4410091547393
Option 1 ID : 4410096112438
Option 2 ID : 4410096112436
Option 3 ID : 4410096112437
Option 4 ID : 4410096112435

Section : Discipline4

Q.1 In an upper primary lesson, students examine how local water scarcity influences daily routines and family dynamics. They use observation and interviews, then discuss possible solutions. Which scope and method combination is most evident here?

- Ans
- 1. Secondary: Specialized disciplines with debates and discussions
 - 2. Upper Primary: Social Science with observation and interviews
 - 3. Primary: EVS with observation and classification methods
 - 4. Higher Secondary: Career preparation and vocational training

Question ID : 4410091633262
Option 1 ID : 4410096451164
Option 2 ID : 4410096451162
Option 3 ID : 4410096451163
Option 4 ID : 4410096451165

Q.2 In the context of using community resources as low-cost teaching materials, which member would be most suitable for demonstrating measurement of length in construction using standard tools like a measuring tape and scale?

- Ans
- 1. Tailor
 - 2. Carpenter
 - 3. Iron smith
 - 4. Goldsmith

Question ID : 4410091658988
Option 1 ID : 4410096550378
Option 2 ID : 4410096550377
Option 3 ID : 4410096550380
Option 4 ID : 4410096550379

Q.3 Which process involves reducing government control over education institutions?

- Ans
- 1. Liberalization
 - 2. Globalization
 - 3. Privatization
 - 4. Centralization

Question ID : 4410091636562
Option 1 ID : 4410096464125
Option 2 ID : 4410096464127
Option 3 ID : 4410096464126
Option 4 ID : 4410096464128

Q.4 A primary English teacher wants to use ICT to encourage collaboration. Which strategy is most effective?

- Ans
- 1. Giving individual quizzes through ICT
 - 2. Showing lessons through video lectures
 - 3. Using online platforms for group projects
 - 4. Assigning reading with e-books

Question ID : 4410091623970
Option 1 ID : 4410096414461
Option 2 ID : 4410096414463
Option 3 ID : 4410096414460
Option 4 ID : 4410096414462

Q.5 Which of the following is an objective of Environmental Studies for children?

- Ans
- 1. Learning a foreign language
 - 2. Cooking traditional food
 - 3. Observation and Reporting
 - 4. Playing video games

Question ID : 4410091632566
Option 1 ID : 4410096448392
Option 2 ID : 4410096448393
Option 3 ID : 4410096448390
Option 4 ID : 4410096448391

Q.6 NGOs are particularly effective in schools when they:

- Ans 1. Align their interventions with school goals
 2. Focus only on short-term measurable outputs
 3. Substitute teachers in regular classrooms
 4. Operate independently of school leadership

Question ID : 4410091583166

Option 1 ID : 4410096254015

Option 2 ID : 4410096254013

Option 3 ID : 4410096254014

Option 4 ID : 4410096254012

Q.7 What is a key feature of pedagogical leadership in schools?

- Ans 1. Decision-making authority
 2. Infrastructure planning
 3. Financial management
 4. Focus on teaching quality

Question ID : 4410091631473

Option 1 ID : 4410096444097

Option 2 ID : 4410096444099

Option 3 ID : 4410096444098

Option 4 ID : 4410096444096

Q.8 Which of the following languages was NOT originally taught using the Grammar Translation Method?

- Ans 1. Latin
 2. Greek
 3. Sanskrit
 4. Mandarin

Question ID : 4410091624742

Option 1 ID : 4410096417499

Option 2 ID : 4410096417500

Option 3 ID : 4410096417502

Option 4 ID : 4410096417501

Q.9 Which of the following reflects a commonly recognised impact of globalisation on education?

- Ans 1. Uniform teaching methods
 2. Expansion of learner choices
 3. Abolition of examinations
 4. Elimination of social inequalities

Question ID : 4410091690133

Option 1 ID : 4410096666821

Option 2 ID : 4410096666820

Option 3 ID : 4410096666819

Option 4 ID : 4410096666818

Q.10 A teacher designs a field trip to a local nursery to link plant life cycle (Science) with traditional medicine preparation (Social Science). Which primary EVS theme is being applied?

- Ans 1. Things We Make and Do
 2. Family and Friends
 3. Food
 4. Travel

Question ID : 4410091550873
Option 1 ID : 4410096125769
Option 2 ID : 4410096125767
Option 3 ID : 4410096125768
Option 4 ID : 4410096125770

Q.11 In a lesson on 'Festivals of India,' a teacher starts by discussing local festivals, then introduces less familiar festivals from other regions, and finally asks students to identify common themes. Which principle of lesson planning does this illustrate?

- Ans 1. Integration: Links prior knowledge, skills/values.
 2. Flexibility: Adaptable to class response.
 3. Psychological Sequence: Known-to-unknown, simple-complex.
 4. Comprehensive: Covers intro-body-closure, aids/assessment.

Question ID : 4410091633240
Option 1 ID : 4410096451074
Option 2 ID : 4410096451076
Option 3 ID : 4410096451077
Option 4 ID : 4410096451075

Q.12 Which function do textbooks primarily serve in the teaching-learning process?

- Ans 1. Limit curriculum flexibility
 2. Replace teacher instruction
 3. Provide structured content
 4. Eliminate assessments

Question ID : 4410091638431
Option 1 ID : 4410096471440
Option 2 ID : 4410096471439
Option 3 ID : 4410096471438
Option 4 ID : 4410096471441

Q.13 What is one benefit of gathering students' background knowledge before class?

- Ans 1. It replaces the need for objectives.
 2. It reduces student engagement.
 3. It delays the lesson.
 4. It helps to shape the introduction and activities.

Question ID : 4410091608639
Option 1 ID : 4410096353478
Option 2 ID : 4410096353479
Option 3 ID : 4410096353476
Option 4 ID : 4410096353477

Q.14 A teacher integrates role-plays and brainstorming sessions, adjusting her lesson when students seem disengaged. What facilitation techniques is she primarily utilizing?

- Ans
- 1. Solo assignments and silent study periods
 - 2. Test-based assessment and grading
 - 3. Adaptability and engagement strategies
 - 4. Fixed lecture format and content delivery

Question ID : 4410091632976
Option 1 ID : 4410096450025
Option 2 ID : 4410096450023
Option 3 ID : 4410096450022
Option 4 ID : 4410096450024

Q.15 What is the main benefit of allowing students to revise their writing based on comments?

- Ans
- 1. It reduces teacher workload
 - 2. It increases the word count
 - 3. It makes grading easier
 - 4. It supports internalising corrections

Question ID : 4410091689701
Option 1 ID : 4410096665141
Option 2 ID : 4410096665139
Option 3 ID : 4410096665140
Option 4 ID : 4410096665138

Q.16 A teacher integrates stories, diagrams, and hands-on experiments while teaching EVS. This reflects:

- Ans
- 1. Scientific, integrated and inclusive approach
 - 2. Structured subject-centered methodology
 - 3. Curriculum-aligned assessment focus
 - 4. Multimodal content delivery strategy

Question ID : 4410091570024
Option 1 ID : 4410096201098
Option 2 ID : 4410096201100
Option 3 ID : 4410096201099
Option 4 ID : 4410096201097

Q.17 How do new social values such as equality and justice emerge in the modern social system?

- Ans
- 1. By avoiding technological progress in the world
 - 2. From lack of diversity in choice of practices
 - 3. Through outdated social customs of community
 - 4. As outcomes of development and modernization

Question ID : 4410091634013
Option 1 ID : 4410096454148
Option 2 ID : 4410096454149
Option 3 ID : 4410096454146
Option 4 ID : 4410096454147

Q.18 Which skill is least developed when using the Grammar Translation Method in English teaching?

- Ans
- 1. Writing
 - 2. Reading
 - 3. Listening
 - 4. Speaking

Question ID : 4410091687170
 Option 1 ID : 4410096655479
 Option 2 ID : 4410096655478
 Option 3 ID : 4410096655480
 Option 4 ID : 4410096655481

Q.19 Why might the Grammar-Translation Method be suitable for large or mixed-ability classes?

- Ans
- 1. It focuses on speaking activities
 - 2. It allows the teacher to explain concepts
 - 3. It prioritizes listening comprehension
 - 4. It encourages student independence

Question ID : 4410091604800
 Option 1 ID : 4410096338364
 Option 2 ID : 4410096338366
 Option 3 ID : 4410096338367
 Option 4 ID : 4410096338365

Q.20 What is a key issue with evaluating students using only closed-ended questions?

- Ans
- 1. Reduces grading time
 - 2. Improves communication skills
 - 3. Limits depth of response
 - 4. Encourages creativity

Question ID : 4410091633512
 Option 1 ID : 4410096452153
 Option 2 ID : 4410096452152
 Option 3 ID : 4410096452150
 Option 4 ID : 4410096452151

Section : Discipline5

Q.1 Which of the following activities is an example of recreational mathematics?

- Ans
- 1. Copying formulas from the textbook
 - 2. Rewriting multiplication tables repeatedly
 - 3. Listening to a lecture without interaction
 - 4. Solving a Sudoku puzzle

Question ID : 4410091553720
 Option 1 ID : 4410096137553
 Option 2 ID : 4410096137554
 Option 3 ID : 4410096137552
 Option 4 ID : 4410096137551

Q.2 What is the smallest counting (natural) number?

- Ans 1. 0
 2. 1
 3. 2
 4. 3

Question ID : 4410091691276
Option 1 ID : 4410096671294
Option 2 ID : 4410096671296
Option 3 ID : 4410096671295
Option 4 ID : 4410096671297

Q.3 Which method involves reasoning from specific observations to general principles?

- Ans 1. Hypothesis testing
 2. Inductive reasoning
 3. Verification
 4. Deductive reasoning

Question ID : 4410091633771
Option 1 ID : 4410096453176
Option 2 ID : 4410096453175
Option 3 ID : 4410096453177
Option 4 ID : 4410096453174

Q.4 A language teacher analyzes mid-semester quiz results, subsequently forming remedial groups and adjusting the pace of instruction. This utilization of evaluation data primarily serves which purpose?

- Ans 1. Feedback for pedagogical change
 2. Measurement of learning extent
 3. Numerical summary of achievement
 4. Certification of terminal skill

Question ID : 4410091551326
Option 1 ID : 4410096127628
Option 2 ID : 4410096127627
Option 3 ID : 4410096127630
Option 4 ID : 4410096127629

Q.5 Which of the following best explains why science kits are considered essential in science education?

- Ans 1. They provide hands-on learning that connects theory to practice.
 2. They focus solely on increasing classroom discipline.
 3. They only provide assessment tools for teachers.
 4. They mainly improve communication skills.

Question ID : 4410091616066
Option 1 ID : 4410096383202
Option 2 ID : 4410096383205
Option 3 ID : 4410096383204
Option 4 ID : 4410096383203

Q.6 A science educator wants to foster scientific thinking by engaging students in an activity that requires them to generate hypotheses and then design experiments to test these ideas. Which teaching approach best exemplifies the nature of science education in this context?

- Ans 1. Inquiry-based experimentation with student input
2. Memorization of factual content
3. Structured demonstration with teacher explanation
4. Collaborative reading of textbook passages

Question ID : 4410091617010
Option 1 ID : 4410096386948
Option 2 ID : 4410096386950
Option 3 ID : 4410096386947
Option 4 ID : 4410096386949

Q.7 What does using a checklist to assess pronunciation, vocabulary use, and fluency during a speech activity help ensure?

- Ans 1. Systematic assessment
2. Memorization of content
3. Random evaluation
4. Subjective judgment

Question ID : 4410091692774
Option 1 ID : 4410096677141
Option 2 ID : 4410096677142
Option 3 ID : 4410096677140
Option 4 ID : 4410096677139

Q.8 How can curriculum and classroom processes unintentionally reinforce gender stereotypes?

- Ans 1. By including stories with diverse protagonists
2. By encouraging equal participation
3. By assigning roles based on traditional gender norms
4. By promoting critical discussion of gender

Question ID : 4410091639002
Option 1 ID : 4410096473574
Option 2 ID : 4410096473576
Option 3 ID : 4410096473573
Option 4 ID : 4410096473575

Q.9 Which of the following is an example of a "mathematical puzzle" commonly used in recreational teaching?

- Ans 1. A timed multiplication drill
2. A standard classroom lecture
3. A logic-based challenge like sudoku
4. A multiplayer board game like Monopoly

Question ID : 4410091606207
Option 1 ID : 4410096343855
Option 2 ID : 4410096343854
Option 3 ID : 4410096343853
Option 4 ID : 4410096343852

Q.10 If a person has both hearing and visual impairments causing severe communication problems, how is this condition classified under the RPwD Act, 2016?

- Ans
- 1. Cerebral Palsy
 - 2. Specific Learning Disabilities
 - 3. Speech and Language Disability
 - 4. Deaf Blindness

Question ID : 4410091633910
 Option 1 ID : 4410096453732
 Option 2 ID : 4410096453730
 Option 3 ID : 4410096453733
 Option 4 ID : 4410096453731

Q.11 How can teachers best address the needs of students with specific learning disabilities when designing assessments?

- Ans
- 1. Requiring only written examinations for evaluation
 - 2. Expecting traditional essay-based answers exclusively
 - 3. Offering alternative assessment methods for demonstration
 - 4. Mandating uniform timed testing conditions

Question ID : 4410091662973
 Option 1 ID : 4410096565186
 Option 2 ID : 4410096565188
 Option 3 ID : 4410096565185
 Option 4 ID : 4410096565187

Q.12 The affective domain in Bloom's taxonomy primarily focuses on which aspect(s) of learning?

- Ans
- 1. Language proficiency
 - 2. Knowledge and understanding
 - 3. Emotions and attitudes
 - 4. Physical coordination

Question ID : 4410091623659
 Option 1 ID : 4410096413219
 Option 2 ID : 4410096413216
 Option 3 ID : 4410096413217
 Option 4 ID : 4410096413218

Q.13 In Bloom's taxonomy, which combination of domains would be targeted by a project that requires students to research, present, and reflect on historical events?

- Ans
- 1. Psychomotor and musical domains only
 - 2. Affective and logical domains only
 - 3. Cognitive, affective, and psychomotor domains
 - 4. Cognitive and linguistic domains only

Question ID : 4410091641192
 Option 1 ID : 4410096481923
 Option 2 ID : 4410096481924
 Option 3 ID : 4410096481921
 Option 4 ID : 4410096481922

Q.14 How can a teacher best address gender bias in classroom resources?

- Ans 1. Audit textbooks for bias
 2. Set gender quotas for leaders
 3. Equalize visual genders
 4. Train on gender roles

Question ID : 4410091635753
Option 1 ID : 4410096460999
Option 2 ID : 4410096461002
Option 3 ID : 4410096461001
Option 4 ID : 4410096461000

Q.15 In a class 6 science lesson, students are asked to float eggs in salt water and record their observations, then discuss why some eggs sink and others float. Which aspect of the nature of science is best illustrated by this activity?

- Ans 1. Empirical evidence-based investigation
 2. Fixed theoretical models
 3. Authority-based explanation
 4. Rote memorization of facts

Question ID : 4410091609277
Option 1 ID : 4410096356032
Option 2 ID : 4410096356035
Option 3 ID : 4410096356033
Option 4 ID : 4410096356034

Q.16 When students with disabilities are provided with accommodations such as extended time, modified seating arrangements, and appropriate assistive devices, this practice represents:

- Ans 1. Social isolation
 2. Structural discrimination
 3. Attitudinal exclusion
 4. Pedagogical inclusion

Question ID : 4410091550608
Option 1 ID : 4410096124885
Option 2 ID : 4410096124886
Option 3 ID : 4410096124884
Option 4 ID : 4410096124883

Q.17 Which approach best supports conceptual understanding of numbers among elementary students?

- Ans 1. Using manipulatives and real-life examples in lessons
 2. Focusing exclusively on rote memorization of tables
 3. Relying entirely on textbook definitions without practice
 4. Assigning only theoretical worksheets for homework

Question ID : 4410091641196
Option 1 ID : 4410096481937
Option 2 ID : 4410096481938
Option 3 ID : 4410096481940
Option 4 ID : 4410096481939

Q.18 Which of the following best demonstrates a school's commitment to working towards gender equality?

- Ans
- 1. Celebrating only International Women's Day
 - 2. Organizing workshops on gender stereotypes
 - 3. Forming single-gender sports teams for competitions
 - 4. Encouraging only girls to participate in science clubs

Question ID : 4410091622902

Option 1 ID : 4410096410383

Option 2 ID : 4410096410381

Option 3 ID : 4410096410380

Option 4 ID : 4410096410382

Q.19 A school wishes to address the issue of gender bias in classroom interactions. Which approach is most effective for promoting inclusive education according to current theories on diversity and gender?

- Ans
- 1. Increasing the number of female teachers in the school
 - 2. Training teachers to recognise and challenge implicit bias
 - 3. Modifying curriculum content alone without altering classroom practices
 - 4. Separating students by gender to minimize bias

Question ID : 4410091618286

Option 1 ID : 4410096392011

Option 2 ID : 4410096392012

Option 3 ID : 4410096392014

Option 4 ID : 4410096392013

Q.20 In evaluating classroom practices, which approach best addresses inequality and diversity?

- Ans
- 1. Highlighting only top achievers
 - 2. Grouping by language ability
 - 3. Encouraging all student voices
 - 4. Limiting culture to textbooks

Question ID : 4410091640516

Option 1 ID : 4410096479259

Option 2 ID : 4410096479260

Option 3 ID : 4410096479261

Option 4 ID : 4410096479262