



HIGH COURT OF DELHI

Participant ID	
Participant Name	
Test Center Name	Aadarsh Pariksha Kendra - Noida Sector 80
Test Date	22/03/2026
Test Time	9:00 AM - 11:00 AM
Subject	Junior Judicial Assistant Restorer

Section : English Language and Comprehension

Q Select the most appropriate option to fill in the blank.

1 She asked, 'Are _____ to the party tonight?'

A 1. came

n
s

2. you coming

3. they came

4. we come

Question ID : 4410091101834

Option 1 ID : 4410094344695

Option 2 ID : 4410094344694

Option 3 ID : 4410094344697

Option 4 ID : 4410094344696

Status : Answered

Chosen Option : 2

Q Which is the correct passive form of the sentence given below?

2 She baked banana bread in the evening.

A 1. Banana bread was baked by her in the evening.

n
s

2. Banana bread is baked by her in the evening.

3. Banana bread has been baked by her in the evening.

4. She baked banana bread by the evening.

Adda247

Test Prime

ALL EXAMS, ONE SUBSCRIPTION



1,00,000+
Mock Tests



**Personalised
Report Card**



**Unlimited
Re-Attempt**



600+
Exam Covered



25,000+ Previous
Year Papers



500%
Refund



ATTEMPT FREE MOCK NOW

4. She baked banana bread by the evening.


Question ID : 4410091249092
 Option 1 ID : 4410094929552
 Option 2 ID : 4410094929551
 Option 3 ID : 4410094929554
 Option 4 ID : 4410094929553
 Status : Answered
 Chosen Option : 1

Q Choose the most appropriate option to fill in the given blank and complete the sentence in indirect speech.

3
 He said, "I will submit the proposal tomorrow."
 He said that he ___ the proposal the next day.

- A n s
- 1. would submit
 - 2. submitted
 - 3. submits
 - 4. will submit

Question ID : 4410091247327
 Option 1 ID : 4410094922522
 Option 2 ID : 4410094922524
 Option 3 ID : 4410094922523
 Option 4 ID : 4410094922521
 Status : Answered
 Chosen Option : 1



Q Two phrases/word segments have been highlighted in the given sentence. Select the CORRECT option that shows the most appropriate one-word substitutes for the highlighted phrases/segments.

4
 The field of personalized medicine, with its ability to tailor treatments to individual genetic profiles, is rapidly becoming greater in its extent and volume, offering the potential to fundamentally change healthcare and unlock cures for diseases once considered untreatable.

- 3428
- A n s
- 1. dwindling; redeem
 - 2. spreading; embolden
 - 3. tarnishing; shift
 - 4. burgeoning; revolutionize

Question ID : 441009431084
 Option 1 ID : 4410091683854
 Option 2 ID : 4410091683855
 Option 3 ID : 4410091683856

Option 4 ID : 4410091683857
 Status : Answered
 Chosen Option : 4

Q Select the most appropriate option to fill in the blanks. If no article is required, select the option with 'No article required'.

5 He is regarded as _____ visionary entrepreneur who prefers to commute by _____ electric vehicle, regardless of weather conditions.

- A n s
- 1. the; the
 - 2. an; an
 - 3. a; an
 - 4. No article required; a

Question ID : 441009749771
 Option 1 ID : 4410092952938
 Option 2 ID : 4410092952939
 Option 3 ID : 4410092952941
 Option 4 ID : 4410092952940
 Status : Answered
 Chosen Option : 3

Q Out of the four alternatives, choose the word opposite in meaning to the underlined word in the given sentence.

6 One should feel ashamed of spreading malicious gossip.

- A n s
- 1. Eccentric
 - 2. Benign
 - 3. Trivial
 - 4. Deceptive

Question ID : 441009263596
 Option 1 ID : 4410091026842
 Option 2 ID : 4410091026844
 Option 3 ID : 4410091026845
 Option 4 ID : 4410091026843
 Status : Marked For Review
 Chosen Option : 3

Q In the following sentence, replace the highlighted phrase with the correct idiom given as options.
 . He is doing something that is dangerous or that may be illegal or dishonest by copying code from online forums without checking the licenses.

- A n s
- 1. beating around the bush
 - 2. breaking the ice

- 3. missing the boat
- 4. sailing close to the wind

Question ID : 441009390879
 Option 1 ID : 4410091529084
 Option 2 ID : 4410091529082
 Option 3 ID : 4410091529083
 Option 4 ID : 4410091529085
 Status : Answered
 Chosen Option : 4

Q Select the most appropriate option to replace the underlined word.
 . She remained optimistic but all her efforts led to immediate success.

- Answers
- 1. and
 - 2. yet
 - 3. though
 - 4. because

Question ID : 44100915267
 Option 1 ID : 44100960945
 Option 2 ID : 44100960946
 Option 3 ID : 44100960947
 Option 4 ID : 44100960948
 Status : Answered
 Chosen Option : 1

Q Select the most suitable option to complete the sentence.
 .
 9 By the time the professor arrives tomorrow, we _____ our presentations.

- Answers
- 1. will be finishing
 - 2. will finishes
 - 3. will have finished
 - 4. will finish

Question ID : 4410091244017
 Option 1 ID : 4410094909376
 Option 2 ID : 4410094909377
 Option 3 ID : 4410094909375
 Option 4 ID : 4410094909374
 Status : Answered
 Chosen Option : 3

Chosen Option : 3

Q Correct the error in the sentence.

1 Neither the manager or the staff were aware of the policy change.

A 1. Replace 'or' with 'nor'

n
s

2. Replace 'were' with 'was'

3. Replace 'aware' with 'know'

4. Replace 'Neither' with 'Either'

Question ID : 4410091319699

Option 1 ID : 4410095210357

Option 2 ID : 4410095210359

Option 3 ID : 4410095210360

Option 4 ID : 4410095210358

Status : Answered

Chosen Option : 1

Q Rearrange the following jumbled segments to form a meaningful sentence.

1 (A) growth in developing countries / (B) effective governance / (C) fostering innovation, and
1 comprehensive / (D) infrastructure development are / (E) essential for sustainable economic
5764

A 1. EDBCA

n
s

2. ABEDC

3. CDBAE

4. BCDEA

Question ID : 441009433420

Option 1 ID : 4410091693199

Option 2 ID : 4410091693201

Option 3 ID : 4410091693200

Option 4 ID : 4410091693198

Status : Answered

Chosen Option : 4

Q Which of the following is the correct active voice form of the given sentence?

1 The potential consequences must be carefully evaluated by policymakers.

2

A 1. Policymakers might carefully evaluate the potential consequences.

n
s

2. Policymakers had carefully evaluated the potential consequences.

3. Policymakers carefully evaluated the potential consequences.

4. Policymakers must carefully evaluate the potential consequences.

Question ID : 4410091041167

Option 1 ID : 4410094113749

Option 2 ID : 4410094113748

Option 3 ID : 4410094113746

Option 4 ID : 4410094113747

Status : Answered

Chosen Option : 4

Q Select the most appropriate antonym of the word in bold.

1 His remarks during the meeting were **germane** to the subject under discussion, as they offered valuable
3 insights and contributed meaningfully to the decision-making process.

A 1. precise

n
s

2. insightful

3. irrelevant

4. deductive

Question ID : 4410091152997

Option 1 ID : 4410094546883

Option 2 ID : 4410094546885

Option 3 ID : 4410094546882

Option 4 ID : 4410094546884

Status : Answered

Chosen Option : 1

Q Select the most appropriate option from the given alternatives to fill in the blank.

1 Direct: She said to the Jury members, "I did not commit this crime."

4 Indirect: She told the Jury members that _____.

- Answers
- 1. she had not committed the crime
 - 2. she has not committed the crime
 - 3. I have not committed the crime
 - 4. I had not committed the crime

Question ID : 4410091329316
 Option 1 ID : 4410095248778
 Option 2 ID : 4410095248777
 Option 3 ID : 4410095248780
 Option 4 ID : 4410095248779
 Status : Answered
 Chosen Option : 1

Q Choose the sentence that is correctly written in present tense.

- Answers
- 1. I will finish my homework before dinner today.
 - 2. I had finished my homework before dinner yesterday.
 - 3. I finish my homework before dinner every day.
 - 4. I finished my homework before dinner yesterday.

Question ID : 4410091236178
 Option 1 ID : 4410094878296
 Option 2 ID : 4410094878295
 Option 3 ID : 4410094878293
 Option 4 ID : 4410094878294
 Status : Answered
 Chosen Option : 3

Q In the following sentence, a segment has been underlined. Select the appropriate proverb to replace the segment in the sentence.

- 1
 6 He decided to take the risk as only those people who do so, tend to succeed more.2538
- Answers
- 1. better to be safe than sorry
 - 2. a stitch in time saves nine
 - 3. practice makes perfect
 - 4. fortune favours the bold

Question ID : 441009447000


Question ID : 441009417600
 Option 1 ID : 4410091635790
 Option 2 ID : 4410091635792
 Option 3 ID : 4410091635793
 Option 4 ID : 4410091635791
 Status : Answered
 Chosen Option : 4

Q Select the option that can be used as a one-word substitute for the underlined phrase in the given sentence.

1 The journalist refused to reveal her sources, demonstrating a strong feeling of loyalty or support for a person or cause, even under pressure.

- Answers
- 1. Apathy
 - 2. Fidelity
 - 3. Betrayal
 - 4. Hostility

Question ID : 4410091742508
 Option 1 ID : 4410096871708
 Option 2 ID : 4410096871706
 Option 3 ID : 4410096871705
 Option 4 ID : 4410096871707
 Status : Answered
 Chosen Option : 2



Q Select the correct option to rectify the error in the given sentence.

1 I became an indie music lover and got upon bands like Arctic Monkeys and Bloc Party while growing up.

- Answers
- 1. into
 - 2. in
 - 3. over
 - 4. above

Question ID : 441009462639
 Option 1 ID : 4410091809062
 Option 2 ID : 4410091809061
 Option 3 ID : 4410091809059
 Option 4 ID : 4410091809060
 Status : Answered
 Chosen Option : 1

Q Select the most appropriate article to fill in the blank. If no article is required, select 'No article'.

19. The chef prepared the special dish for ____ VIP guests.

Answers

- 1. an
- 2. a
- 3. No article
- 4. the

Question ID : 4410091102901
 Option 1 ID : 4410094348963
 Option 2 ID : 4410094348962
 Option 3 ID : 4410094348965
 Option 4 ID : 4410094348964
 Status : Answered
 Chosen Option : 3

20. Select the most appropriate proverb to substitute the highlighted segment in the given sentence.

2 He trusted appearances and was cheated, forgetting that not everything attractive is valuable.

Answers

- 1. a watched pot never boils
- 2. the proof of the pudding is in the eating
- 3. a friend in need is a friend indeed
- 4. all that glitters is not gold

Question ID : 4410091257441
 Option 1 ID : 4410094962617
 Option 2 ID : 4410094962614
 Option 3 ID : 4410094962616
 Option 4 ID : 4410094962615
 Status : Answered
 Chosen Option : 4

21. Choose the correct answer from the following options.

2 Que: She is ____ most accomplished musician in ____ orchestra.

Answers

- 1. the, a
- 2. the, the
- 3. a, the
- 4. No article, the

Question ID : 441009486293

Option 1 ID : 4410091900570

Option 2 ID : 4410091900571

Option 3 ID : 4410091900569

Option 4 ID : 4410091900572

Status : Answered

Chosen Option : 4

Q Select the most appropriate ANTONYM of the highlighted word in the given sentence.

2 The student's explanation was spurious.

2

A 1. deceptive

n

s

2. objective

3. genuine

4. prejudiced

Question ID : 4410091257489

Option 1 ID : 4410094962805

Option 2 ID : 4410094962806

Option 3 ID : 4410094962807

Option 4 ID : 4410094962808

Status : Answered

Chosen Option : 3

Q Parts of a sentence are given below. While the first and the last parts (S1 and S6) are in the correct order, the parts in between are jumbled up. Arrange the parts in the correct order to form a meaningful

2 sentence.

3 S1- Had the researchers exercised greater caution during the experiment,

P- they would not have faced allegations of scientific negligence,

Q- before publishing their findings in a widely circulated journal,

R- by thoroughly verifying the accuracy of their preliminary data,

S - which later proved to contain significant inconsistencies,

S6- the subsequent controversy might have been avoided.

A 1. PRSQ

n

s

2. PRQS

3. RSQP

4. SQPR

Question ID : 4410091740021

Option 1 ID : 4410096861650

Option 2 ID : 4410096861648

Option 3 ID : 4410096861651

Option 4 ID : 4410096861649
Status : Answered
Chosen Option : 2

Q Choose the correct option which expresses the antonym of the underlined word given below.
. The scientist dismissed the theory as spurious, citing a lack of evidence and flawed data.

2
4

- A n s
- 1. Adamant
 - 2. Inordinate
 - 3. Counterfeit
 - 4. Authentic

Question ID : 441009591418
Option 1 ID : 4410092320784
Option 2 ID : 4410092320782
Option 3 ID : 4410092320783
Option 4 ID : 4410092320781
Status : Answered
Chosen Option : 4

Q Choose the correct option to complete the sentence given below.

.
2 Although the theory was initially dismissed, it was _____ confirmed by later experiments and gained
5 acceptance.

- A n s
- 1. summarily
 - 2. tentatively
 - 3. eventually
 - 4. cursorily

Question ID : 4410091260439
Option 1 ID : 4410094974616
Option 2 ID : 4410094974617
Option 3 ID : 4410094974619
Option 4 ID : 4410094974618
Status : Answered
Chosen Option : 3

Q Identify the error in the sentence given below.

. The cat jumped over the wall.

2
6

A 1. jumped over

n
s

2. no error

3. The cat

4. the wall.

Question ID : 441009400175

Option 1 ID : 4410091566159

Option 2 ID : 4410091566161

Option 3 ID : 4410091566158

Option 4 ID : 4410091566160

Status : Answered

Chosen Option : 2

Q Choose the correct option to convert the following sentence into passive voice.

. Will the research team publish the findings in an international journal?

2
7

A 1. Are the findings being published in an international journal by the research team?

n
s

2. Were the findings published in an international journal by the research team?

3. Have the findings been published in an international journal by the research team?

4. Will the findings be published in an international journal by the research team?

Question ID : 441009133681

Option 1 ID : 441009531465

Option 2 ID : 441009531466

Option 3 ID : 441009531464

Option 4 ID : 441009531463

Status : Answered

Chosen Option : 4

Q Select the option that can be used as a one-word substitute for the underlined phrase in the given sentence.

2 Despite being born into poverty, he showed remarkable determination and eventually became a person
8 who hates and distrusts human beings, preferring isolation over companionship.

A 1. Recluse

n

S

- 2. Philanthropist
- 3. Introvert
- 4. Misanthrope

Question ID : 4410091742476
 Option 1 ID : 4410096871578
 Option 2 ID : 4410096871577
 Option 3 ID : 4410096871580
 Option 4 ID : 4410096871579
 Status : Answered
 Chosen Option : 3

Q Select the correct option to replace the underlined segment in the given proverb.

2 A rolling stone gathers no direction.

9

A 1. no moss

n
s

- 2. no goal
- 3. no destination
- 4. no home



Question ID : 441009644103
 Option 1 ID : 4410092530601
 Option 2 ID : 4410092530599
 Option 3 ID : 4410092530598
 Option 4 ID : 4410092530600
 Status : Answered
 Chosen Option : 2



Q Complete the sentence with an appropriate option:

3 The scientist was praised _____ her contribution to the project but criticized _____ the lack of
 0 transparency _____ the data analysis.

A 1. for / for / with

n
s

- 2. about / over / with
- 3. for / for / in
- 4. on / at / for

Question ID : 4410091271059
 Option 1 ID : 4410095016174
 Option 2 ID : 4410095016173
 Option 3 ID : 4410095016172

Option 3 ID : 4410095016172
 Option 4 ID : 4410095016175
 Status : Answered
 Chosen Option : 3

Q Select the correct active voice.

3 Sita is recognized for her efforts.

- 1
- A 1. They recognize Sita for her efforts.
- n 2. Sita recognized her efforts.
- s 3. They recognized Sita and efforts.
4. Efforts are recognized Sita.

Question ID : 44100986094
 Option 1 ID : 441009342087
 Option 2 ID : 441009342088
 Option 3 ID : 441009342089
 Option 4 ID : 441009342086
 Status : Answered
 Chosen Option : 1

Q Select the option that can be used as a one-word substitute for the given group of words.

3 One who runs away from justice or the law.160

- 2
- A 1. Fugitive
- n 2. Prisoner
- s 3. Criminal
4. Broker

Question ID : 4410091112082
 Option 1 ID : 4410094384538
 Option 2 ID : 4410094384539
 Option 3 ID : 4410094384537
 Option 4 ID : 4410094384540
 Status : Answered
 Chosen Option : 1

Q In the given question, a statement divided into different segments is given. Rearrange all the segments to form a coherent statement.

- 3
- 3 (A) man may journey at his will / (B) and that nobody has to keep it in good repair / (C) with the aid of pickaxes and barrels of tars and steamrollers / (D) the sea is a great highway along which / (E) the great

road that has no walls or hedges hemming it in

- Answers
- 1. ABCED
 - 2. BCADE
 - 3. DAEB C
 - 4. BADEC

Question ID : 441009435554
 Option 1 ID : 4410091701736
 Option 2 ID : 4410091701737
 Option 3 ID : 4410091701734
 Option 4 ID : 4410091701735
 Status : Answered
 Chosen Option : 3

Q Identify the correct direct speech form of the given reported statement:

3 Mr. Kurian announced that the company would launch a new product soon.

- Answers
- 1. Mr. Kurian announces, "The company launch a new product soon."
 - 2. Mr. Kurian announced, "The company launches a new product soon."
 - 3. Mr. Kurian announced, "The company will launch a new product soon."
 - 4. Mr. Kurian announced, "The company would launch a new product soon."

Question ID : 4410091326574
 Option 1 ID : 4410095237804
 Option 2 ID : 4410095237806
 Option 3 ID : 4410095237805
 Option 4 ID : 4410095237807
 Status : Answered
 Chosen Option : 3

Q Find out the one-word substitute to the following.

. A person who renounces the world and leads an austere life

- Answers
- 1. Pessimist
 - 2. Hermit
 - 3. Renegade
 - 4. Philosopher

Question ID : 441009256784
 Option 1 ID : 4410091001021

Option 2 ID : 4410091001023
 Option 3 ID : 4410091001022
 Option 4 ID : 4410091001024
 Status : Not Answered
 Chosen Option : --

Comprehension:

Read the given passage and answer the questions that follow.

At first, films were very short, sometimes only a few minutes or less. They were shown at fairgrounds, music halls, or anywhere a screen could be set up and a room darkened. Subjects included local scenes and activities, views of foreign lands, short comedies and newsworthy events. The films were accompanied by lectures, music and a lot of audience participation. Although they did not have synchronised dialogue, they were not 'silent' as they are sometimes described. By 1914, several national film industries were established. At this time, Europe, Russia and Scandinavia were the dominant industries; America was much less important. Films became longer and storytelling, or narrative became the dominant form. As more people paid to see movies, the industry which grew around them was prepared to invest more money in their production, distribution and exhibition, so large studios were established and dedicated cinemas built. The First World War greatly affected the film industry in Europe, and the American industry grew in relative importance.

The first 30 years of cinema were characterised by the growth and consolidation of an industrial base, the establishment of the narrative form, and refinement of technology. Colour was first added to black-and-white movies through hand colouring, tinting, toning and stencilling. By 1906, the principles of colour separation were used to produce so-called 'natural colour' moving images with the British Kinemacolor process, first presented to the public in 1909.

SubQuestion No : 36

Q Select an appropriate title for the passage.

.
3
6

- A n s
- 1. The Influence of War on Movie-Making
 - 2. The Golden Age of American Cinema
 - 3. Sound and Colour in Hollywood Films
 - 4. The Origins and Development of Cinema

Question ID : 4410091307146
 Option 1 ID : 4410095160310
 Option 2 ID : 4410095160308
 Option 3 ID : 4410095160309
 Option 4 ID : 4410095160307
 Status : Answered
 Chosen Option : 4

Comprehension:

Read the given passage and answer the questions that follow.

At first, films were very short, sometimes only a few minutes or less. They were shown at fairgrounds, music halls, or anywhere a screen could be set up and a room darkened. Subjects included local scenes and activities, views of foreign lands, short comedies and newsworthy events. The films were accompanied by lectures, music and a lot of audience participation. Although they did not have synchronised dialogue, they were not 'silent' as they are sometimes described. By 1914, several national film industries were established. At this time, Europe, Russia and Scandinavia were the dominant industries; America was much less important. Films became longer and storytelling, or narrative became the dominant form. As more people paid to see movies, the industry which grew around them was prepared to invest more money in their production, distribution and exhibition, so large studios were established and dedicated cinemas built. The First World War greatly affected the film industry in Europe, and the American industry grew in relative importance.

The first 30 years of cinema were characterised by the growth and consolidation of an industrial base, the establishment of the narrative form, and refinement of technology. Colour was first added to black-and-white movies through hand colouring, tinting, toning and stencilling. By 1906, the principles of colour separation were used to produce so-called 'natural colour' moving images with the British Kinemacolor process, first presented to the public in 1909.

SubQuestion No : 37

Q Select the option that is a fact presented in the passage.

.
3
7

- A n s
- 1. American cinema was the most important industry in the early 1900s.
 - 2. Silent films were not entertaining to audiences.
 - 3. Films were initially produced only for the elite.
 - 4. Colour separation was first used in moving images in 1906.

Question ID : 4410091307147

Option 1 ID : 4410095160311

Option 2 ID : 4410095160313

Option 3 ID : 4410095160314

Option 4 ID : 4410095160312

Status : Answered

Chosen Option : 4

Comprehension:

Read the given passage and answer the questions that follow.

At first, films were very short, sometimes only a few minutes or less. They were shown at fairgrounds, music halls, or anywhere a screen could be set up and a room darkened. Subjects included local scenes and activities, views of foreign lands, short comedies and newsworthy events. The films were accompanied by lectures, music and a lot of audience participation. Although they did not have synchronised dialogue, they were not 'silent' as they are sometimes described. By 1914, several national film industries were established. At this time, Europe, Russia and Scandinavia were the dominant industries; America was much less important. Films became longer and storytelling, or narrative became the dominant form. As more people paid to see movies, the industry which grew around them was prepared to invest more money in their production, distribution and exhibition, so large studios were established and dedicated cinemas built. The First World War greatly affected the film industry in Europe, and the American industry grew in relative importance.

The first 30 years of cinema were characterised by the growth and consolidation of an industrial base, the establishment of the narrative form, and refinement of technology. Colour was first added to black-and-white movies through hand colouring, tinting, toning and stencilling. By 1906, the principles of colour separation were used to produce so-called 'natural colour' moving images with the British Kinemacolor process, first presented to the public in 1909.

SubQuestion No : 38

Q Select the correct summary for the passage.

.
3
8
A
n
s

- 1. The cinema of Europe and Russia collapsed after the First World War, leaving only Hollywood to thrive.
- 2. The history of cinema is largely the story of American dominance in filmmaking.
- 3. The invention of synchronised sound marked the real beginning of cinema as a serious art form.
- 4. Early cinema developed from short films to longer narratives with established industries and colour separation also helped it.

Question ID : 4410091307148

Option 1 ID : 4410095160317

Option 2 ID : 4410095160315

Option 3 ID : 4410095160316

Option 4 ID : 4410095160318

Status : Answered

Chosen Option : 4

Comprehension:

Read the given passage and answer the questions that follow.

At first, films were very short, sometimes only a few minutes or less. They were shown at fairgrounds, music halls, or anywhere a screen could be set up and a room darkened. Subjects included local scenes and activities, views of foreign lands, short comedies and newsworthy events. The films were accompanied by lectures, music and a lot of audience participation. Although they did not have synchronised dialogue, they were not 'silent' as they are sometimes described. By 1914, several national film industries were established. At this time, Europe, Russia and Scandinavia were the dominant industries; America was much less important. Films became longer and storytelling, or narrative became the dominant form. As more people paid to see movies, the industry which grew

around them was prepared to invest more money in their production, distribution and exhibition, so large studios were established and dedicated cinemas built. The First World War greatly affected the film industry in Europe, and the American industry grew in relative importance.

The first 30 years of cinema were characterised by the growth and consolidation of an industrial base, the establishment of the narrative form, and refinement of technology. Colour was first added to black-and-white movies through hand colouring, tinting, toning and stencilling. By 1906, the principles of colour separation were used to produce so-called 'natural colour' moving images with the British Kinemacolor process, first presented to the public in 1909.

SubQuestion No : 39

Q select an appropriate synonym of the word 'consolidation'.

.
3
9
A
n
s

1. Unification

2. Decline

3. Weakening

4. Division

Question ID : 4410091307149

Option 1 ID : 4410095160319


Option 2 ID : 4410095160322

Option 3 ID : 4410095160320

Option 4 ID : 4410095160321

Status : Answered

Chosen Option : 1



Comprehension:

Read the given passage and answer the questions that follow.

At first, films were very short, sometimes only a few minutes or less. They were shown at fairgrounds, music halls, or anywhere a screen could be set up and a room darkened. Subjects included local scenes and activities, views of foreign lands, short comedies and newsworthy events. The films were accompanied by lectures, music and a lot of audience participation. Although they did not have synchronised dialogue, they were not 'silent' as they are sometimes described. By 1914, several national film industries were established. At this time, Europe, Russia and Scandinavia were the dominant industries; America was much less important. Films became longer and storytelling, or narrative became the dominant form. As more people paid to see movies, the industry which grew around them was prepared to invest more money in their production, distribution and exhibition, so large studios were established and dedicated cinemas built. The First World War greatly affected the film industry in Europe, and the American industry grew in relative importance.

The first 30 years of cinema were characterised by the growth and consolidation of an industrial base, the establishment of the narrative form, and refinement of technology. Colour was first added to black-and-white movies through hand colouring, tinting, toning and stencilling. By 1906, the principles of colour separation were used to produce so-called 'natural colour' moving images with the British Kinemacolor process, first presented to the public in 1909.

SubQuestion No : 40

Q Select an appropriate tone of the passage.

..... appropriate tone of the passage--

4
0

- Answers
- 1. Persuasive and argumentative
 - 2. Critical and disapproving
 - 3. Humorous and light-hearted
 - 4. Informative and objective

Question ID : 4410091307150
 Option 1 ID : 4410095160325
 Option 2 ID : 4410095160326
 Option 3 ID : 4410095160324
 Option 4 ID : 4410095160323
 Status : Answered
 Chosen Option : 4



Comprehension:

Read the following passage carefully and answer the questions that follow.

Published in The Times of India on October 29, 2023, Ravi Singh's editorial titled "The evolution of trends: Crypto, AI, and beyond" explores the allure and risks of following popular trends in technology, finance, and society. The author recalls feeling left behind during the cryptocurrency boom, as stories of rapid wealth, complex jargon, and constant online advice created intense pressure to invest. Friends' enthusiasm amplified this fear of missing out. However, the sudden collapse of the crypto market, including arrests of prominent figures linked to major exchanges, revealed the speculative nature of the frenzy. This episode echoed historical bubbles such as the Dutch Tulip mania and highlighted the value of safer investments.

The editorial examines how trends operate across finance, fashion, health, and technology. Many trends, such as diet fads or short-lived games, are ephemeral, generating excitement but leaving little lasting impact. Some innovations, however, permanently reshape society. The internet, once underestimated even by experts, became central to economic and social life. A key challenge for early adopters is distinguishing transformative developments from temporary phenomena, requiring assessment of whether a technology solves real problems, represents a breakthrough, or risks obsolescence, as seen with pagers and physical media formats. Regarding Artificial Intelligence, Singh notes that while growth seems inevitable, uncertainty remains about where it will create lasting value. The editorial concludes by warning against blind participation, advocating informed judgment, careful risk assessment, and lessons from past trends as reliable guides in navigating emerging innovations.

SubQuestion No : 41

QWhich historical example is used to compare the cryptocurrency crash?

4
1

- Answers
- 1. Great Depression
 - 2. Dutch Tulip mania
 - 3. Dot-com bubble
 - 4. 2008 financial crisis

- 3. Dot-com collapse
- 4. South Sea Bubble

Question ID : 4410091590252
 Option 1 ID : 4410096281488
 Option 2 ID : 4410096281487
 Option 3 ID : 4410096281490
 Option 4 ID : 4410096281489
 Status : Answered
 Chosen Option : 2

Comprehension:

Read the following passage carefully and answer the questions that follow.

Published in The Times of India on October 29, 2023, Ravi Singh's editorial titled "The evolution of trends: Crypto, AI, and beyond" explores the allure and risks of following popular trends in technology, finance, and society. The author recalls feeling left behind during the cryptocurrency boom, as stories of rapid wealth, complex jargon, and constant online advice created intense pressure to invest. Friends' enthusiasm amplified this fear of missing out. However, the sudden collapse of the crypto market, including arrests of prominent figures linked to major exchanges, revealed the speculative nature of the frenzy. This episode echoed historical bubbles such as the Dutch Tulip mania and highlighted the value of safer investments.

The editorial examines how trends operate across finance, fashion, health, and technology. Many trends, such as diet fads or short-lived games, are ephemeral, generating excitement but leaving little lasting impact. Some innovations, however, permanently reshape society. The internet, once underestimated even by experts, became central to economic and social life. A key challenge for early adopters is distinguishing transformative developments from temporary phenomena, requiring assessment of whether a technology solves real problems, represents a breakthrough, or risks obsolescence, as seen with pagers and physical media formats. Regarding Artificial Intelligence, Singh notes that while growth seems inevitable, uncertainty remains about where it will create lasting value. The editorial concludes by warning against blind participation, advocating informed judgment, careful risk assessment, and lessons from past trends as reliable guides in navigating emerging innovations.

SubQuestion No : 42

Q Which attitude does the author convey toward trends?

.
4
2

- A n s
- 1. Moral opposition to speculation
 - 2. Balanced caution informed by experience
 - 3. Enthusiastic acceptance of risk
 - 4. Complete skepticism toward innovation

Question ID : 4410091590253
 Option 1 ID : 4410096281494
 Option 2 ID : 4410096281492
 Option 3 ID : 4410096281493
 Option 4 ID : 4410096281491
 Status : Answered

Chosen Option : 2

Comprehension:

Read the following passage carefully and answer the questions that follow.

Published in The Times of India on October 29, 2023, Ravi Singh's editorial titled "The evolution of trends: Crypto, AI, and beyond" explores the allure and risks of following popular trends in technology, finance, and society. The author recalls feeling left behind during the cryptocurrency boom, as stories of rapid wealth, complex jargon, and constant online advice created intense pressure to invest. Friends' enthusiasm amplified this fear of missing out. However, the sudden collapse of the crypto market, including arrests of prominent figures linked to major exchanges, revealed the speculative nature of the frenzy. This episode echoed historical bubbles such as the Dutch Tulip mania and highlighted the value of safer investments.

The editorial examines how trends operate across finance, fashion, health, and technology. Many trends, such as diet fads or short-lived games, are ephemeral, generating excitement but leaving little lasting impact. Some innovations, however, permanently reshape society. The internet, once underestimated even by experts, became central to economic and social life. A key challenge for early adopters is distinguishing transformative developments from temporary phenomena, requiring assessment of whether a technology solves real problems, represents a breakthrough, or risks obsolescence, as seen with pagers and physical media formats. Regarding Artificial Intelligence, Singh notes that while growth seems inevitable, uncertainty remains about where it will create lasting value. The editorial concludes by warning against blind participation, advocating informed judgment, careful risk assessment, and lessons from past trends as reliable guides in navigating emerging innovations.

SubQuestion No : 43

Q What central theme does the passage primarily explore?

.
4
3
A
n
s

✓ 1. Need for cautious engagement with trends

✗ 2. Psychological impact of modern technologies

✗ 3. Ethical concerns in digital innovation

✗ 4. Historical evolution of financial systems

Question ID : 4410091590254

Option 1 ID : 4410096281498

Option 2 ID : 4410096281495

Option 3 ID : 4410096281497

Option 4 ID : 4410096281496

Status : **Marked For Review**

Chosen Option : 1

Comprehension:

Read the following passage carefully and answer the questions that follow.

Published in The Times of India on October 29, 2023, Ravi Singh's editorial titled "The evolution of trends: Crypto, AI, and beyond" explores the allure and risks of following popular trends in technology, finance, and society. The author recalls feeling left behind during the cryptocurrency boom, as stories of rapid wealth, complex jargon, and constant online advice created intense pressure to invest. Friends' enthusiasm amplified this fear of missing out. However, the sudden collapse of the crypto market, including arrests of prominent figures linked to major exchanges, revealed the speculative nature of the frenzy. This episode echoed historical bubbles such as the Dutch Tulip mania and highlighted the value of safer investments.

The editorial examines how trends operate across finance, fashion, health, and technology. Many trends, such as diet fads or short-lived games, are ephemeral, generating excitement but leaving little lasting impact. Some innovations, however, permanently reshape society. The internet, once underestimated even by experts, became central to economic and social life. A key challenge for early adopters is distinguishing transformative developments from temporary phenomena, requiring assessment of whether a technology solves real problems, represents a breakthrough, or risks obsolescence, as seen with pagers and physical media formats. Regarding Artificial Intelligence, Singh notes that while growth seems inevitable, uncertainty remains about where it will create lasting value. The editorial concludes by warning against blind participation, advocating informed judgment, careful risk assessment, and lessons from past trends as reliable guides in navigating emerging innovations.

SubQuestion No : 44

Q In the passage, what does the word "ephemeral" most nearly mean?

.
4
4

A 1. Economically unstable

2. Technologically complex

3. Culturally insignificant

4. Short-lived or temporary

Question ID : 4410091590255

Option 1 ID : 4410096281500

Option 2 ID : 4410096281501

Option 3 ID : 4410096281502

Option 4 ID : 4410096281499

Status : Answered

Chosen Option : 4

Comprehension:

Read the following passage carefully and answer the questions that follow.

Published in The Times of India on October 29, 2023, Ravi Singh's editorial titled "The evolution of trends: Crypto, AI, and beyond" explores the allure and risks of following popular trends in technology, finance, and society. The author recalls feeling left behind during the cryptocurrency boom, as stories of rapid wealth, complex jargon, and constant online advice created intense pressure to invest. Friends' enthusiasm amplified this fear of missing out. However, the sudden collapse of the crypto market, including arrests of prominent figures linked to major exchanges, revealed the speculative nature of the frenzy. This episode echoed historical bubbles such as the Dutch Tulip mania and highlighted the value of safer investments.

The editorial examines how trends operate across finance, fashion, health, and technology. Many trends, such as diet fads or short-lived games, are ephemeral, generating excitement but leaving little lasting impact. Some innovations, however, permanently reshape society. The internet, once underestimated even by experts, became central to economic and social life. A key challenge for early adopters is distinguishing transformative developments from temporary phenomena, requiring assessment of whether a technology solves real problems, represents a breakthrough, or risks obsolescence, as seen with pagers and physical media formats. Regarding Artificial Intelligence, Singh notes that while growth seems inevitable, uncertainty remains about where it will create lasting value. The editorial concludes by warning against blind participation, advocating informed judgment, careful risk assessment, and lessons from past trends as reliable guides in navigating emerging innovations.

SubQuestion No : 45

Q What can be inferred about the author's view on cryptocurrency investing?

.
4
5
A
n
s

- 1. It reflected unchecked enthusiasm and high risk
- 2. It was misunderstood but ultimately beneficial
- 3. It failed due to poor technological design
- 4. It required stronger government regulation

Question ID : 4410091590256
Option 1 ID : 4410096281504
Option 2 ID : 4410096281503
Option 3 ID : 4410096281505
Option 4 ID : 4410096281506
Status : Answered

Chosen Option : 1

Section : General Awareness Knowledge and Current Affairs Events

Q Which of the following Acts of India provides for the constitution of the National Legal Services Authority (NALSA)?

1
A
n
s

- 1. Consumer Protection Act, 1986
- 2. Arbitration and Conciliation Act, 1996
- 3. Indian Evidence Act, 1872
- 4. Legal Services Authorities Act, 1987

Question ID : 441009502611

Option 1 ID : 4410091965615
 Option 2 ID : 4410091965616
 Option 3 ID : 4410091965617
 Option 4 ID : 4410091965614
 Status : Answered
 Chosen Option : 4

Q Which state won the National Energy Conservation Award (NECA) 2025 for its performance in energy efficiency and sustainability initiatives?

2

Answers


1. Tamil Nadu

2. Maharashtra

3. Gujarat

4. Karnataka

Question ID : 4410091585284
 Option 1 ID : 4410096262347
 Option 2 ID : 4410096262346
 Option 3 ID : 4410096262348
 Option 4 ID : 4410096262345
 Status : Answered
 Chosen Option : 3



Q Which of the following pairs is correctly matched?

3

Answers

1. Article 32 – Rights of Minorities to establish and administer Educational Institutions

2. Article 13 (1) – Any pre-constitutional law inconsistent with Fundamental Rights is void to the extent of that inconsistency

3. Article 134 – Special leave to appeal by the Supreme Court.

4. Article 131 – Appellate jurisdiction of the Supreme Court in civil cases.

Question ID : 441009634754
 Option 1 ID : 4410092493164
 Option 2 ID : 4410092493163
 Option 3 ID : 4410092493166
 Option 4 ID : 4410092493165
 Status : Answered
 Chosen Option : 2

Q In which form of puppetry art is a flat figure pressed against the screen with a strong

4 source of light behind it?

Answers
 1. Glove Puppetry

2. Shadow Puppetry

3. String Puppetry

4. Rod Puppetry

Question ID : 441009131261

Option 1 ID : 441009521644

Option 2 ID : 441009521642

Option 3 ID : 441009521645

Option 4 ID : 441009521643

Status : Answered

Chosen Option : 2

5 Q Which actress won the Best Actress in a leading role at the 71st National Film Awards?

Answers
 1. Alia Bhatt

2. Deepika Padukone

3. Taapsee Pannu

4. Rani Mukerji

Question ID : 4410091330296

Option 1 ID : 4410095252812

Option 2 ID : 4410095252810

Option 3 ID : 4410095252813

Option 4 ID : 4410095252811

Status : Answered

Chosen Option : 1

6 Q How many bones comprise the human axial skeleton?

Answers
 1. 126

2. 100

3. 206

4. 80

Question ID : 441009509532

Question ID : 441009199322

Option 1 ID : 4410091993246

Option 2 ID : 4410091993248

Option 3 ID : 4410091993249

Option 4 ID : 4410091993247

Status : Answered

Chosen Option : 3

Q Which energy source is classified as non-conventional and has seen significant development in Gujarat and Tamil Nadu?

7

A 1. Nuclear energy

n

 2. Tidal energy 3. Wind energy 4. Thermal energy

s

Question ID : 4410091029462

Option 1 ID : 4410094069544

Option 2 ID : 4410094069543

Option 3 ID : 4410094069542

Option 4 ID : 4410094069545

Status : Answered

Chosen Option : 2

Q In September 2025, the National Institute of Disaster Management's new Centre for Climate Resilience was inaugurated by which Union Minister?

8

A 1. Kiren Rijju

n

 2. Amit Shah 3. Bhupender Yadav 4. Nirmala Sitharaman

s

Question ID : 4410091573132

Option 1 ID : 4410096213354

Option 2 ID : 4410096213351

Option 3 ID : 4410096213352

Option 4 ID : 4410096213353

Status : Answered

Chosen Option : 1

Q Which article of the Indian constitution deals with Comptroller and Auditor-General of India?

.
9

A 1. Article 324

n

s

2. Article 315

3. Article 280

4. Article 148

Question ID : 441009327362

Option 1 ID : 4410091275800

Option 2 ID : 4410091275801

Option 3 ID : 4410091275798

Option 4 ID : 4410091275799

Status : Not Answered

Chosen Option : --

Q Which 20th-century Odissi dancer is known for reconstructing the dance form from temple traditions?

.
1

0

A 1. Yamini Krishnamurthy

n

s

2. Rukmini Devi Arundale

3. Birju Maharaj

4. Kelucharan Mohapatra

Question ID : 4410091185134

Option 1 ID : 4410094674688

Option 2 ID : 4410094674687

Option 3 ID : 4410094674686

Option 4 ID : 4410094674685

Status : Not Answered

Chosen Option : --

Q Which article of the Indian Constitution allows Parliament to modify the rights conferred by Part III in their application to the Armed Forces?

1
1

A 1. Article 15

n
s

2. Article 21

3. Article 27

4. Article 33

Question ID : 4410091384464

Option 1 ID : 4410095468628

Option 2 ID : 4410095468629

Option 3 ID : 4410095468630

Option 4 ID : 4410095468631

Status : Answered

Chosen Option : 4

Q In which city of India did Accenture propose establishing a new campus to create around 12,000 jobs in September 2025?

1
2

A 1. Bengaluru

n
s

2. Visakhapatnam

3. Pune

4. Hyderabad

Question ID : 4410091331564

Option 1 ID : 4410095257828

Option 2 ID : 4410095257826

Option 3 ID : 4410095257827

Option 4 ID : 4410095257825

Status : Not Answered

Chosen Option : --

Q Which constitutional body must communicate its written decision to the President of India before the issuance of a Proclamation of Emergency under Article 352?

1
3

A 1. The Council of States

n
-

S

- 2. The Governor's Council
- 3. The Chief Justice of India
- 4. The Union Cabinet

Question ID : 4410091638903
Option 1 ID : 4410096473189
Option 2 ID : 4410096473190
Option 3 ID : 4410096473191
Option 4 ID : 4410096473188
Status : Answered
Chosen Option : 4

Q In which type of cases does the Supreme Court exercise exclusive original jurisdiction?

.

1

4

A 1. Appeals from High Courts in criminal cases

n

s

- 2. Election disputes regarding Parliament
- 3. Protection of Fundamental Rights
- 4. Disputes between Union and States

Question ID : 441009324852
Option 1 ID : 4410091265684
Option 2 ID : 4410091265686
Option 3 ID : 4410091265685
Option 4 ID : 4410091265683
Status : Answered
Chosen Option : 3

Adda247

Q Which city hosted the Khelo India University Games 2025?

.

1

5

A 1. Chennai

n

s

- 2. Udaipur
- 3. Delhi
- 4. Mumbai

Question ID : 4410091585417
Option 1 ID : 4410096262849
Option 2 ID : 4410096262846

Option 3 ID : 4410096262847
 Option 4 ID : 4410096262848
 Status : Not Answered
 Chosen Option : --

Q Which among the following statements is FALSE related to the Supreme Court of India?

- .
1
6
- A 1. The provisions regarding powers, functions, appointment and jurisdiction of the Supreme Court are contained in Articles 124 to 147 of the Constitution.
- s 2. Under Article 143, the Supreme Court has special advisory jurisdiction on matters referred by the President of India.
3. The appellate jurisdiction of the Supreme Court arises on certificates granted by High Courts under Articles 132, 133 or 134 of the Constitution.
4. The Supreme Court has no jurisdiction over appeals arising from the judgments delivered by Tribunals in India.

Question ID : 4410091091377
 Option 1 ID : 4410094302945
 Option 2 ID : 4410094302943
 Option 3 ID : 4410094302942
 Option 4 ID : 4410094302944
 Status : Answered
 Chosen Option : 4

Q Who was the president-designate of the Confederation of Indian Industry (CII) during EXCON 2025?

- .
1
7
- A 1. R Mukundan
- n 2. Sunil Bharti Mittal
- s 3. Harsh Pati Singhania
4. Chandrajit Banerjee

Question ID : 4410091584668
 Option 1 ID : 4410096259897
 Option 2 ID : 4410096259898
 Option 3 ID : 4410096259900
 Option 4 ID : 4410096259899
 Status : Not Answered
 Chosen Option : --

Q Who took charge as the Chief of Research and Analysis Wing (R&AW) on July 1, 2025?

- .
1
8
- A 1. Ajay Sharma

Answers

1. Ajay Sharma

2. Ravi Kumar

3. Sunil Gupta

4. Parag Jain

Question ID : 4410091593288

Option 1 ID : 4410096293502

Option 2 ID : 4410096293503

Option 3 ID : 4410096293504

Option 4 ID : 4410096293501

Status : Answered

Chosen Option : 4

Q The Great Indian Plains are primarily formed by which of the following rivers?

Answers

1. Godavari, Krishna, Kaveri

2. Narmada, Tapti, Mahi

3. Ganga, Indus, Brahmaputra

4. Luni, Jhelum, Chenab

Question ID : 4410091364023

Option 1 ID : 4410095388023

Option 2 ID : 4410095388025

Option 3 ID : 4410095388022

Option 4 ID : 4410095388024

Status : Answered

Chosen Option : 1

Q Which of the following was set up in 1990 to maintain the relationships among states and the Union of India?

Answers

1. National Integration Council

2. NITI Aayog

3. Inter-State Council (ISC)

4. Finance Commission

Question ID : 441009329424

Option 1 ID : 4410091284133

Option 2 ID : 4410091284132
Option 3 ID : 4410091284130
Option 4 ID : 4410091284131
Status : Answered
Chosen Option : 3

Q Who took the message of Swadeshi to Bombay and Pune?

.
2
1

A 1. Bipin Chandra Pal

n
s

2. Lokmanya Tilak

3. Aurobindo Ghosh

4. Lala Lajpat Rai

Question ID : 4410091365960
Option 1 ID : 4410095395434
Option 2 ID : 4410095395432
Option 3 ID : 4410095395431
Option 4 ID : 4410095395433
Status : Answered
Chosen Option : 2

Q Which Indian port on the eastern coast is a significant exporter of engineering goods due to its strategic trade connectivity?

.
2
2

A 1. Kolkata

n
s

2. Visakhapatnam

3. Paradip

4. Chennai

Question ID : 4410091029337
Option 1 ID : 4410094068991
Option 2 ID : 4410094068992
Option 3 ID : 4410094068993
Option 4 ID : 4410094068990
Status : Answered
Chosen Option : 2

Q In 2025, as per the IMF forecast, India overtook which country to become the fourth-largest economy by . absolute GDP?

2
3

A 1. Germany

n

s

2. United Kingdom

3. France

4. Japan

Question ID : 4410091321721

Option 1 ID : 4410095218406

Option 2 ID : 4410095218405

Option 3 ID : 4410095218407

Option 4 ID : 4410095218408

Status : Answered

Chosen Option : 3

Q In December 2025, where was the exhibition of cinema-inspired sketches by Artist Namboothiri held?

2
4

A 1. Lalit Kala Akademi, New Delhi

n

s

2. Kairali Theatre, Thiruvananthapuram

3. Kala Bhavan, Kochi

4. Nehru Gallery, Chennai

Question ID : 4410091585334

Option 1 ID : 4410096262536

Option 2 ID : 4410096262533

Option 3 ID : 4410096262534

Option 4 ID : 4410096262535

Status : Answered

Chosen Option : 1

Q Where was the first semi-final of the ICC Women's Cricket World Cup 2025 held?

.
2
5

A 1. Mumbai

n
s

2. Kolkata

3. Guwahati

4. Chennai

Question ID : 4410091331593

Option 1 ID : 4410095257944

Option 2 ID : 4410095257941

Option 3 ID : 4410095257942

Option 4 ID : 4410095257943

Status : Answered

Chosen Option : 1

Q In 2025, on which date did the United Nations declare the International Day Against Colonialism in All Its
Forms and Manifestations, following the adoption of Resolution A/RES/80/106?

.
2
6

A 1. 10 December

n
s

2. 1 January

3. 14 December

4. 20 December

Question ID : 4410091597768

Option 1 ID : 4410096311090

Option 2 ID : 4410096311092

Option 3 ID : 4410096311089

Option 4 ID : 4410096311091

Status : Not Answered

Chosen Option : --

Q Who won the 2025 US Open men's singles title on 7 September 2025?

.
2
7

A 1. Daniil Medvedev

n
s

2. Jannik Sinner

3. Carlos Alcaraz

✗ 4. Novak Djokovic

Question ID : 4410091329560
Option 1 ID : 4410095249815
Option 2 ID : 4410095249813
Option 3 ID : 4410095249816
Option 4 ID : 4410095249814
Status : Answered
Chosen Option : 4

Q Which team did India defeat to win the ICC Women's World Cup 2025?

.
2
8
A
n
s

✓ 1. South Africa

✗ 2. England

✗ 3. New Zealand

✗ 4. Australia

Question ID : 4410091585401
Option 1 ID : 4410096262791
Option 2 ID : 4410096262792
Option 3 ID : 4410096262793
Option 4 ID : 4410096262790
Status : Not Answered
Chosen Option : --

Adda247

Q The iqta system, introduced by the Delhi Sultanate, was primarily aimed at:

.
2
9
A
n
s

✗ 1. promoting trade

✗ 2. religious conversions

✗ 3. revenue assignment to military officers

✓ 4. land redistribution to peasants

Question ID : 441009312044
Option 1 ID : 4410091214610
Option 2 ID : 4410091214611
Option 3 ID : 4410091214612
Option 4 ID : 4410091214613
Status : Not Answered

Chosen Option : --

Q The Inter-State Council, a mechanism to promote Centre–State coordination and among the states , is established under which Article?

30

A 1. Article 263

n

s 2. Article 262

3. Article 312

4. Article 280

Question ID : 441009318830

Option 1 ID : 4410091241605

Option 2 ID : 4410091241604

Option 3 ID : 4410091241607

Option 4 ID : 4410091241606

Status : Not Answered

Chosen Option : --

Q Which of the following government schemes aims to provide old age protection and social security of unorganised workers?

31

A 1. Pradhan Mantri Shram Yogi Maandhan Yojana

n

s 2. Rashtriya Swasthya Bima Yojana (RSBY)

3. Pradhan Mantri Suraksha Bima Yojana (PMSBY)

4. Atal Pension Yojana (APY)

Question ID : 441009635352

Option 1 ID : 4410092495557

Option 2 ID : 4410092495558

Option 3 ID : 4410092495555

Option 4 ID : 4410092495556

Status : Answered

Chosen Option : 4

Q Which of the following nutrients provides the highest energy per gram?

32

A 1. Fibre

n

s 2. Carbohydrate

- ✓ 3. Fat
- ✗ 4. Protein

Question ID : 441009392715
 Option 1 ID : 4410091536376
 Option 2 ID : 4410091536374
 Option 3 ID : 4410091536375
 Option 4 ID : 4410091536373
 Status : Answered
 Chosen Option : 3

Q Which geographical formation connects the Andaman Islands with the Arakan Yoma ranges of Myanmar?

- .
3
3
A n s
- ✗ 1. Western Continental Shelf is a submerged coastal ridge merging with coral coastlines
 - ✓ 2. Andaman Nicobar Ridge submerged mountain chain linking to the Arakan Yoma
 - ✗ 3. Lakshadweep Ridge is an underwater mountain chain in the Arabian basin
 - ✗ 4. Himalayan Arc is a curved mountain chain along the northern plains of India

Question ID : 4410091038521
 Option 1 ID : 4410094104229
 Option 2 ID : 4410094104227
 Option 3 ID : 4410094104226
 Option 4 ID : 4410094104228
 Status : Answered
 Chosen Option : 2

Q Which of the following local winds blows hot and dry across North India during summer?

- .
3
4
A n s
- ✓ 1. Loo
 - ✗ 2. Blossom Shower
 - ✗ 3. Sirocco
 - ✗ 4. Mango Shower

Question ID : 441009142232
 Option 1 ID : 441009565074
 Option 2 ID : 441009565077
 Option 3 ID : 441009565075
 Option 4 ID : 441009565076

Status : **Answered**
Chosen Option : 1

Q The Supreme Court does NOT issue which of the following writs under Article 32?

.
3
5
A
n
s

- 1. Habeas Corpus
- 2. Habeas Corpus
- 3. Quo Warranto
- 4. Certiorari

Question ID : 441009359667
Option 1 ID : 4410091404668
Option 2 ID : 4410091404667
Option 3 ID : 4410091404669
Option 4 ID : 4410091404670
Status : **Answered**
Chosen Option : 1

Q In 2025, the United Nations proposed shutting down which of its agencies by the end of 2026 due to funding challenges, with plans to integrate its functions into the broader UN system?

3
6
A
n
s

- 1. UNAIDS-Joint United Nations Programme on HIV/AIDS
- 2. WHO-World Health Organization
- 3. UNICEF-United Nations Children's Fund
- 4. UNHCR-United Nations High Commissioner for Refugees

Question ID : 4410091329401
Option 1 ID : 4410095249143
Option 2 ID : 4410095249142
Option 3 ID : 4410095249141
Option 4 ID : 4410095249144
Status : **Not Answered**
Chosen Option : --

Q Sayyid Ahmed Khan promoted modern education and founded which institution in Aligarh in 1875?

.
3
7

A 1. Muhammadan Anglo-Oriental College

n
s

2. Aligarh Muslim University

3. Jamia Millia Islamia

4. Osmania University

Question ID : 4410091424999

Option 1 ID : 4410095628629

Option 2 ID : 4410095628628

Option 3 ID : 4410095628627

Option 4 ID : 4410095628630

Status : Answered

Chosen Option : 2

Q Which of the following Acts created the Indian Council of 15 members to advise the secretary of state?

.
3
8

A 1. Charter Act, 1853

n

s

2. Government of India Act, 1858

3. Regulating Act, 1773

4. Pitt's India Act, 1784

Question ID : 441009502532

Option 1 ID : 4410091965301

Option 2 ID : 4410091965298

Option 3 ID : 4410091965299

Option 4 ID : 4410091965300

Status : Not Answered

Chosen Option : --

Q In which year was the Tattvabodhini Sabha established by Debendranath Tagore?

.
3

9

A 1. 1828

n

 2. 1855 3. 1839 4. 1848

Question ID : 4410091343036

Option 1 ID : 4410095304465

Option 2 ID : 4410095304468

Option 3 ID : 4410095304466

Option 4 ID : 4410095304467

Status : Not Answered

Chosen Option : --

Q Who among the following was a German chemist in early 1800's, the first to consider the idea of trends among properties of elements?

4

0

A 1. Jons Jacob Berzelius

n

 2. Johann Dobereiner 3. Josiah Willard Gibbs 4. Barry J. Marshall

Question ID : 441009624787

Option 1 ID : 4410092453282

Option 2 ID : 4410092453283

Option 3 ID : 4410092453280

Option 4 ID : 4410092453281

Status : Not Answered

Chosen Option : --

Q In 2025, researchers from the Centre for Nano and Soft Matter Sciences (CeNS), in collaboration with which of the following, developed a flexible, safe, and eco-friendly battery?

4

1

A 1. Indian Institute of Technology (IIT) Madras

n

 2. Indian Institute of Technology (IIT) Bombay 3. National Physical Laboratory (NPL), New Delhi 4. Centre for Nano Science and Engineering, IISc

Question ID : 4410094221074

Question ID : 4410091331671

Option 1 ID : 4410095258258

Option 2 ID : 4410095258259

Option 3 ID : 4410095258260

Option 4 ID : 4410095258257

Status : Answered

Chosen Option : 4

Q What distinguishes Kalamkari art from Andhra Pradesh, practiced since 17th century CE?

.
4
2

A 1. Embroidered silk with gold threads

n
s

2. Hand painted cotton with natural dyes

3. Terracotta reliefs with floral designs

4. Carved wooden panels with motifs

Question ID : 4410091185020

Option 1 ID : 4410094674190

Option 2 ID : 4410094674191

Option 3 ID : 4410094674192

Option 4 ID : 4410094674193

Status : Answered

Chosen Option : 1



Q The Panchayati Raj Extension Act 1996 applies to the Schedule Areas mentioned in _____.

.
4
3

A 1. Ninth Schedule

n
s

2. Sixth Schedule

3. Eleventh Schedule

4. Third Schedule

Question ID : 4410091088449

Option 1 ID : 4410094291297

Option 2 ID : 4410094291296

Option 3 ID : 4410094291298

Option 4 ID : 4410094291299

Status : Answered

Chosen Option : 1

Q According to Ashoka's Dhamma policy, a grace of _____ days was given to those convicts who

. were sentenced to death.

4
4

A 1. three

2. thirty

3. twenty

4. fifteen

Question ID : 4410091123843

Option 1 ID : 4410094430933

Option 2 ID : 4410094430934

Option 3 ID : 4410094430936

Option 4 ID : 4410094430935

Status : Not Answered

Chosen Option : --

Q Which among the following Schedules of the Indian Constitution consists of nominating members to the Rajya Sabha by the President of India?

4
5

A 1. Schedule 10

2. Schedule 7

3. Schedule 4

4. Schedule 3

Question ID : 4410091090605

Option 1 ID : 4410094299862

Option 2 ID : 4410094299863

Option 3 ID : 4410094299861

Option 4 ID : 4410094299864

Status : Not Answered

Chosen Option : --

Section : General Intelligence Reasoning Ability and Numerical Arithmetic Ability

Q Varun ranked 19th from the top and 56th from the bottom in his class. How many students are there in his class?

1

A 1. 73

2. 75

3. 76

✔ 4.74

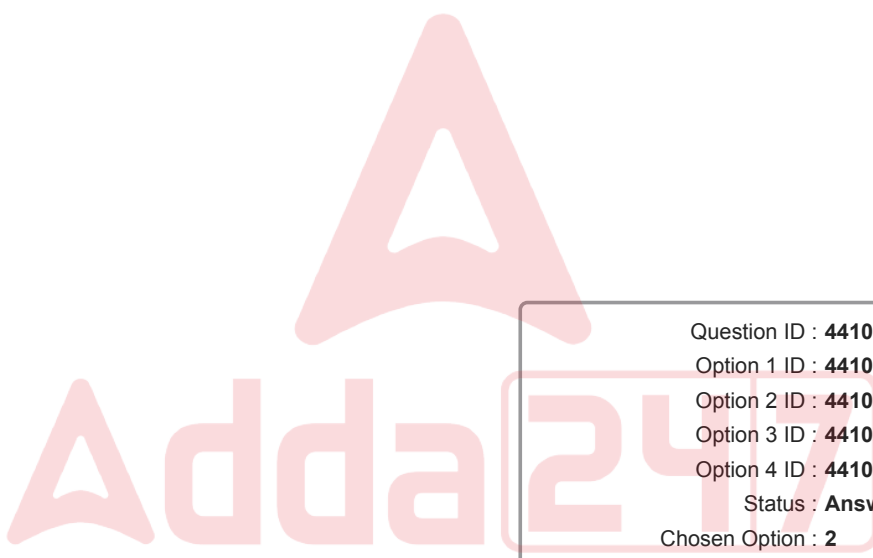
Question ID : 4410091393396
 Option 1 ID : 4410095503219
 Option 2 ID : 4410095503220
 Option 3 ID : 4410095503221
 Option 4 ID : 4410095503218
 Status : Answered
 Chosen Option : 4

Q What should come in place of '?' in the given series?

2 21 32 43 54 65 ?

A 1.75
 n
 s

- ✔ 2.76
- 3.84
- 4.79



Question ID : 4410091272690
 Option 1 ID : 4410095022769
 Option 2 ID : 4410095022768
 Option 3 ID : 4410095022771
 Option 4 ID : 4410095022770
 Status : Answered
 Chosen Option : 2

Q₃ Arrange the numbers $\frac{8}{9}$, $\frac{15}{16}$, $\frac{12}{13}$ in descending order.

- A 1. $\frac{8}{9}$, $\frac{12}{13}$, $\frac{15}{16}$
 n
 s
- 2. $\frac{15}{16}$, $\frac{8}{9}$, $\frac{12}{13}$
 - ✔ 3. $\frac{15}{16}$, $\frac{12}{13}$, $\frac{8}{9}$
 - 4. $\frac{8}{9}$, $\frac{15}{16}$, $\frac{12}{13}$

Question ID : 441009648718
 Option 1 ID : 4410092549089
 Option 2 ID : 4410092549087
 Option 3 ID : 4410092549086
 Option 4 ID : 4410092549088
 Status : Answered
 Chosen Option : 3

Chosen Option : 2

Q Girish scored 673 marks in an examination and was 7 marks short of 80% of maximum marks. In the same examination his friend scored 765 marks. What is the percentage of marks scored by his friend?6631

4

A 1. 92%

n

s

 2. 90% 3. 93% 4. 91%

Question ID : 441009857913

Option 1 ID : 4410093384627

Option 2 ID : 4410093384624

Option 3 ID : 4410093384626

Option 4 ID : 4410093384625

Status : Answered

Chosen Option : 2

Q Arrange the following in ascending order. 17 : 9, 27 : 6, 11 : 26, 23 : 115240

5

A 1. 17:9, 27:6, 11:26, 23:11

n

s

 2. 11:26, 17:9, 23:11, 27:6 3. 27:6, 23:11, 17:9, 11:26 4. 27:6, 17:9, 23:11, 11:26

Question ID : 441009898553

Option 1 ID : 4410093548285

Option 2 ID : 4410093548282

Option 3 ID : 4410093548284

Option 4 ID : 4410093548283

Status : Answered

Chosen Option : 2

Q Sachin invested ₹1620 at 6% per annum simple interest in a bank. What amount (in ₹) will he get after 4 years? 5107

6

A 1. 388.8

n

s

 2. 2008.8 3. 1908.8 4. 488.8

Question ID : 441009568681

Option 1 ID : 4410092229845

Option 2 ID : 4410092229844

Option 3 ID : 4410092229846

Option 4 ID : 4410092229847

Status : Answered

Chosen Option : 2

Q If + means -, - means ×, × means ÷, ÷ means +, then what will come in place of the question mark (?) in the following equation?

$$745 - 12 \div 117 + 357 \times 17 = ?$$
A 1. 636

n

s

 2. 674 3. 655 4. 661

Question ID : 4410091041281

Option 1 ID : 4410094114436

Option 2 ID : 4410094114435

Option 3 ID : 4410094114437

Option 4 ID : 4410094114434

Status : Answered

Chosen Option : 1

Q A shopkeeper buys 120 eggs at the rate of ₹6 each. On the way, 20 eggs were broken. He sold the remaining eggs at the rate of ₹8 each. Find his gain or loss percentage.

8

A 1. Gain $11\frac{1}{9}\%$

n

s

- 2. Loss $11\frac{1}{9}\%$
- 3. Gain $10\frac{1}{5}\%$
- 4. Loss $10\frac{1}{5}\%$

Question ID : 441009286086
 Option 1 ID : 4410091111395
 Option 2 ID : 4410091111394
 Option 3 ID : 4410091111397
 Option 4 ID : 4410091111396
 Status : Answered
 Chosen Option : 1

Q A and B can do a piece of work in 12 days and 64 days respectively. Both work for 3 days and then A goes away. How long (in days) will B take to complete the remaining work?3589

- Answers
- 1. 47
 - 2. 46
 - 3. 45
 - 4. 44

Question ID : 441009519873
 Option 1 ID : 4410092034914
 Option 2 ID : 4410092034912
 Option 3 ID : 4410092034911
 Option 4 ID : 4410092034913
 Status : Answered
 Chosen Option : 3



Q Convert the following percentage into an equivalent ratio and simplify:
 . 56.25%

- Answers
- 1. 7:16
 - 2. 9:16
 - 3. 11:16
 - 4. 13:16

Question ID : 44100914425
 Option 1 ID : 44100957549
 Option 2 ID : 44100957550
 Option 3 ID : 44100957551

Option 3 ID : 44100957551
 Option 4 ID : 44100957552
 Status : Answered
 Chosen Option : 2

Q A boat takes 18 minutes to go 64.4 km upstream. The ratio of the speed of the boat in still water to that of the stream is 8 : 7. How much total time (in hours) will the boat take to go 63.5 km upstream and 13.5 km downstream?

- 1
 A 1. 3.3
 n 2. 3.5
 s 3. 0.3
 4. 1.8

Question ID : 441009544470
 Option 1 ID : 4410092133279
 Option 2 ID : 4410092133278
 Option 3 ID : 4410092133276
 Option 4 ID : 4410092133277
 Status : Answered
 Chosen Option : 3

Q Given below are two sets of numbers. In each set of numbers, a certain mathematical operation on the first number results in the second number. Similarly, a certain mathematical operation on the second number results in the third number and so on. Which of the options follows the same set of operations as given in the question?

(NOTE: A two/three-digit number cannot be broken down into individual digits for operations. E.g. if 37 is followed by 10, the operation cannot be 3 + 7, as a two-digit number cannot be broken down into individual digits.)

98 - 79 - 60 - 41, 112 - 93 - 74 - 55

- A 1. 86 - 67 - 48 - 39
 n 2. 102 - 83 - 74 - 45
 s 3. 108 - 99 - 70 - 61
 4. 92 - 73 - 54 - 35

Question ID : 4410091152256
 Option 1 ID : 4410094543937
 Option 2 ID : 4410094543934
 Option 3 ID : 4410094543935
 Option 4 ID : 4410094543936
 Status : Answered
 Chosen Option : 4

Q Seven people, A, B, C, D, E, F and G, are sitting in a row, facing north. Only two people sit to the right of

3
 . G. Only two people sit between A and G. F is the immediate neighbour of both E and A. D sits to the immediate left of C. How many people sit between D and B?

- Answers
- 1. Four
 - 2. Two
 - 3. Three
 - 4. Five

Question ID : 4410091264836
 Option 1 ID : 4410094992282
 Option 2 ID : 4410094992284
 Option 3 ID : 4410094992281
 Option 4 ID : 4410094992283
 Status : Answered
 Chosen Option : 1

Q Based on alphabetical order, three of the following four are alike in a certain way and thus form a group. Which one does not belong to that group?
 1 (Note: The odd one out is not based on the number of consonants or vowels, nor their position in the 4 letter cluster.)

- Answers
- 1. NYJ
 - 2. GRI
 - 3. RCN
 - 4. ITE

Question ID : 4410091391565
 Option 1 ID : 4410095495927
 Option 2 ID : 4410095495925
 Option 3 ID : 4410095495926
 Option 4 ID : 4410095495928
 Status : Answered
 Chosen Option : 3

5
 Q The list price of a gaming PC is ₹62,500. It is sold to a retailer after two successive discounts of 34% and 4%. The retailer wants to earn a profit of 5% on his cost after allowing a 44% discount (on its new list price) to the customer. At what price should he list the gaming PC?

- Answers
- 1. ₹74,327
 - 2. ₹74,107
 - 3. ₹74,255
 - 4. ₹74,250

Question ID : 441009915483
 Option 1 ID : 4410093616186

Option 2 ID : 4410093616184
 Option 3 ID : 4410093616185
 Option 4 ID : 4410093616183
 Status : Not Answered
 Chosen Option : --

QF, G, H, I, V and W live on six different floors of the same building. The lowermost floor in the building is numbered 1, the floor above it, number 2 and so on till the topmost floor is numbered 6. No one lives 1 below W. Only two people live between W and G. Only I lives above H. F lives on an even numbered floor.
 6 How many people live between V and I?

- Answers
- 1. Two
 - 2. One
 - 3. Four
 - 4. Three

Question ID : 4410091399349
 Option 1 ID : 4410095527142
 Option 2 ID : 4410095527141
 Option 3 ID : 4410095527144
 Option 4 ID : 4410095527143
 Status : Answered
 Chosen Option : 1

Q If $A : B = 1 : 5$, $B : C = 4 : 5$ and $C : D = 5 : 7$, then $A : B : C : D$ is:

- Answers
- 1. 4 : 18 : 25 : 35
 - 2. 4 : 20 : 23 : 35
 - 3. 2 : 20 : 25 : 35
 - 4. 4 : 20 : 25 : 35

Question ID : 4410091108875
 Option 1 ID : 4410094372496
 Option 2 ID : 4410094372497
 Option 3 ID : 4410094372495
 Option 4 ID : 4410094372494
 Status : Answered
 Chosen Option : 4

Q BDCA is related to DFEC in a certain way based on the English alphabetical order. In the same way, RTSQ . is related to TVUS. To which of the following is QSRP related to, following the same logic?3434

1
8

A 1. SUTR

n

s 2. SUSR

3. SVSY

4. STSR

Question ID : 441009757742

Option 1 ID : 4410092984961

Option 2 ID : 4410092984964

Option 3 ID : 4410092984962

Option 4 ID : 4410092984963

Status : Answered

Chosen Option : 1

Q An investment scheme offers 20% compound interest per annum, calculated on a half-yearly basis. A . person deposits ₹4,200 each on 1 January and 1 July of a year. What is the total interest earned at the end 1 of the year?

9

A 1. ₹1,432

n

2. ₹1,338

3. ₹1,302

4. ₹1,428

Question ID : 441009572766

Option 1 ID : 4410092246186

Option 2 ID : 4410092246185

Option 3 ID : 4410092246184

Option 4 ID : 4410092246187

Status : Not Answered

Chosen Option : --

Q Evaluate: $16 + 21 \div 3 - 3 \times 46134$

.
2
0

A 1. 14

n
s

2. 11

3. 10

4. 13

Question ID : 441009522418

Option 1 ID : 4410092045094

Option 2 ID : 4410092045091

Option 3 ID : 4410092045092

Option 4 ID : 4410092045093

Status : Answered

Chosen Option : 2

Q If 'A' stands for '+', 'B' stands for '×', 'C' stands for '+' and 'D' stands for '-', what will come in place of

. question mark (?) in the following equation?

$2 \ 18 \ D \ 16 \ A \ 2 \ C \ 7 \ B \ 8 = ?$

1

A 1. 63

n
s

2. 62

3. 66

4. 65

Question ID : 4410091125438

Option 1 ID : 4410094437296

Option 2 ID : 4410094437295

Option 3 ID : 4410094437298

Option 4 ID : 4410094437297

Status : Answered

Chosen Option : 3

Q In a certain code language,

. A + B means 'A is the sister of B'

2 A - B means 'A is the brother of B'

2 A × B means 'A is the wife of B'

A ÷ B means 'A is the father of B'

Based on the above, how is D related to J if 'D-F+G÷H×J'?

A 1. Wife's mother's brother

n
s

2. Wife's father's brother

- 3. Wife's father's father
- 4. Wife's mother's father

Question ID : 4410091129894
 Option 1 ID : 4410094455072
 Option 2 ID : 4410094455070
 Option 3 ID : 4410094455071
 Option 4 ID : 4410094455073
 Status : Answered
 Chosen Option : 2

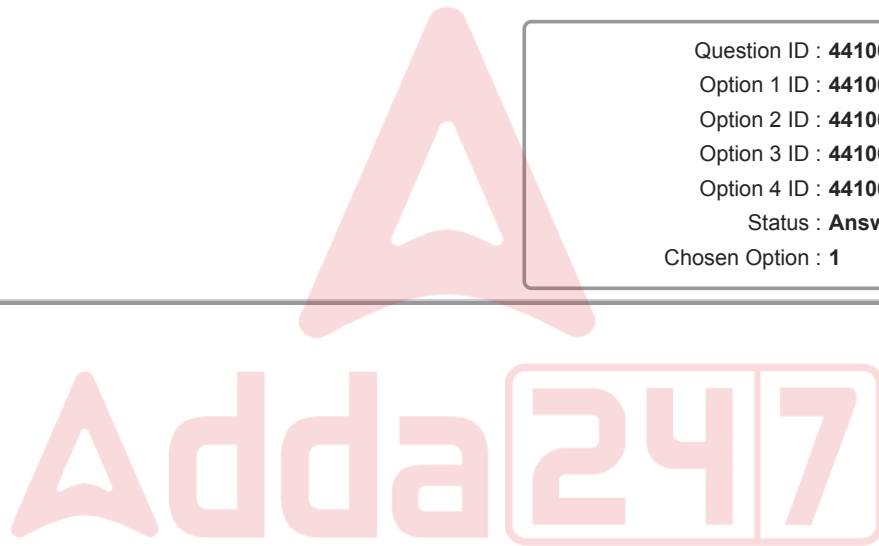
Q Select the triad which follows the same pattern as that followed by the two triads given below. Both triads follow the same pattern.

- 2 EA - GD - IG
- 3 MI - OL - QO

A 1. RN - TQ - VT

- 2. HK - LN - FL
- 3. TW - YZ - SY
- 4. RM - UT - PR

Question ID : 441009811076
 Option 1 ID : 4410093198428
 Option 2 ID : 4410093198430
 Option 3 ID : 4410093198427
 Option 4 ID : 4410093198429
 Status : Answered
 Chosen Option : 1



Q Which of the following letter-number clusters will replace the question mark (?) in the given series to make it logically complete?

- 2 GLR111 , QVB94 , AFL77 , KPV60 , ?

A 1. VZF43

- 2. UZG43
- 3. UYF43
- 4. UZF43

Question ID : 4410091432009
 Option 1 ID : 4410095656347
 Option 2 ID : 4410095656348
 Option 3 ID : 4410095656349
 Option 4 ID : 4410095656346
 Status : Answered

Chosen Option : 4

Q In a certain code language,
 . A + B means 'A is the daughter of B'
 2 A - B means 'A is the brother of B'
 5 A x B means 'A is the wife of B'
 A # B means 'A is the father of B'
 Based on the above, how is T related to K if 'T - Y + B x G # K' ?

- Answers
- 1. Husband
 - 2. Father
 - 3. Brother
 - 4. Son

Question ID : 441009371364
 Option 1 ID : 4410091451363
 Option 2 ID : 4410091451361
 Option 3 ID : 4410091451360
 Option 4 ID : 4410091451362
 Status : Answered
 Chosen Option : 3



Q Each letter in the word ABFARED is changed to the letter immediately following it in the English alphabetical order and then all the letters thus formed are arranged in alphabetical order. Which of the 2 following letters will be fourth from the right in the new group of letters thus formed? 1570

- Answers
- 1. F
 - 2. G
 - 3. C
 - 4. E

Question ID : 441009787696
 Option 1 ID : 4410093104785
 Option 2 ID : 4410093104786
 Option 3 ID : 4410093104783
 Option 4 ID : 4410093104784
 Status : Answered
 Chosen Option : 4

Q If the water source is placed along X-Y, as shown in the figure, which of the given options will be the water reflection of the given figure.



- Answers
- 1. E Σ t ! ε Δ

- 2. E S t i e 7
- 3. E S f ! e Δ
- 4. E S f ! 3 Δ

Question ID : 441009309757
 Option 1 ID : 4410091205552
 Option 2 ID : 4410091205553
 Option 3 ID : 4410091205554
 Option 4 ID : 4410091205555
 Status : Answered
 Chosen Option : 4

Q The listing price of a flat is ₹6,20,000. A shopkeeper gives the following four schemes of discount to his customers. Which of the following scheme is more beneficial to the customers?968

2
8
A
n
s

- 1. Successive discounts of 14% and 11%
- 2. Successive discounts of 12% and 11%
- 3. Successive discounts of 12% and 12%
- 4. Successive discounts of 11% and 13%

Question ID : 441009894281
 Option 1 ID : 4410093531194
 Option 2 ID : 4410093531195
 Option 3 ID : 4410093531196
 Option 4 ID : 4410093531197
 Status : Answered
 Chosen Option : 1

Q The ratio of the cost prices of articles X and Y is 2 : 5. A man earns a profit of 20% by selling X and loses 15% by selling Y. What is his gain/loss percentage in the entire transaction?

2
9
A
n
s

- 1. Gain, 5%
- 2. Gain, 6.5%
- 3. Loss, 4.5%
- 4. Loss, 5%

Question ID : 441009915258
 Option 1 ID : 4410093615286
 Option 2 ID : 4410093615284
 Option 3 ID : 4410093615285
 Option 4 ID : 4410093615283

Status : Answered
Chosen Option : 4

Q Two cyclists, A and B, start at the same time from the same point on a circular track 880 meters long.
. Cyclist A rides at a speed of 13 m/s, and cyclist B rides at 9 m/s, but in the opposite direction. In how
3 many seconds will they meet for the first time?

0

A 1. 40 seconds

n
s

2. 38 seconds

3. 30 seconds

4. 29 seconds

Question ID : 441009949832
Option 1 ID : 4410093752777
Option 2 ID : 4410093752776
Option 3 ID : 4410093752775
Option 4 ID : 4410093752774

Status : Answered
Chosen Option : 1