



HIGH COURT OF DELHI

Participant ID	
Participant Name	
Test Center Name	iON Digital Zone iDZ 1 Sector 62
Test Date	22/03/2026
Test Time	1:00 PM - 3:00 PM
Subject	Junior Judicial Assistant Restorer

Section : English Language and Comprehension

Q.1 In the given question, a statement divided into different segments is given. The first segment is fixed, rearrange the other segments to form a coherent statement:

Hubble was recently retrained on NGC 6302 / (A) from near-ultraviolet to near-infrared / (B) to observe it across a more complete spectrum of light, / (C) helping researchers better understand the mechanics at work in its technicolor "wings" of gas / (D) known as the "Butterfly Nebula,"⁸¹⁸⁸

- Ans
- 1. CADB
 - 2. ABCD
 - 3. DBAC
 - 4. DCAB

Question ID : 441009435844
 Option 1 ID : 4410091702897
 Option 2 ID : 4410091702894
 Option 3 ID : 4410091702896
 Option 4 ID : 4410091702895
 Status : Answered
 Chosen Option : 4

Adda247

Test Prime

ALL EXAMS, ONE SUBSCRIPTION



1,00,000+
Mock Tests



**Personalised
Report Card**



**Unlimited
Re-Attempt**



600+
Exam Covered



25,000+ Previous
Year Papers



500%
Refund



ATTEMPT FREE MOCK NOW

Q.2 Choose the most appropriate article from the options to complete the sentence.

The restaurant near _____ beach serves delicious seafood.

- Ans
- 1. a
 - 2. an
 - 3. No article required
 - 4. the

Question ID : 4410091297698
Option 1 ID : 4410095122936
Option 2 ID : 4410095122937
Option 3 ID : 4410095122939
Option 4 ID : 4410095122938
Status : Answered
Chosen Option : 4

Q.3 Which of the following options does not correctly convert the given sentence into direct speech?

The professor remarked that if the data had been analyzed earlier, the results would have been published

- Ans
- 1. The professor said, "The results would have been published if the data had been analyzed earlier."
 - 2. The professor said, "Had the data been analyzed earlier, the results would have been published."
 - 3. The professor said, "If the data had been analyzed earlier, the results would be published."
 - 4. The professor said, "If the data had been analyzed earlier, the results would have been published."

Question ID : 4410091235251
Option 1 ID : 4410094874737
Option 2 ID : 4410094874736
Option 3 ID : 4410094874735
Option 4 ID : 4410094874734
Status : Answered
Chosen Option : 2

Q.4 In the following question, a sentence has been given in passive voice. Out of the four alternatives suggested, select the one which best expresses the same sentence in active voice.

This case will be looked into by the police.

- Ans 1. The police will look into this case.
 2. The police would look into this case.
 3. The police will be looking into this case.
 4. The police will have looked into this case.

Question ID : 441009102237
Option 1 ID : 441009406968
Option 2 ID : 441009406970
Option 3 ID : 441009406969
Option 4 ID : 441009406971
Status : Answered
Chosen Option : 1

Q.5 From the options, choose the most appropriate word that can substitute the group of words given below.

Something that is impossible to explain.

- Ans 1. duplicity
 2. inevitable
 3. Inimitable
 4. inexplicable

Question ID : 441009452929
Option 1 ID : 4410091770387
Option 2 ID : 4410091770386
Option 3 ID : 4410091770385
Option 4 ID : 4410091770388
Status : Answered
Chosen Option : 4

Q.6 Choose the correct option to complete the given sentence.

We have a slight delay because of the poor weather, but we ____ off as soon as possible.

- Ans
- 1. will have been taking
 - 2. will be taken
 - 3. will be taking
 - 4. will have taken

Question ID : 4410091235096
Option 1 ID : 4410094874124
Option 2 ID : 4410094874123
Option 3 ID : 4410094874125
Option 4 ID : 4410094874122
Status : Answered
Chosen Option : 2

Q.7 Select the option that can be used as a one-word substitute for the underlined phrase in the given sentence.

The scientist was celebrated worldwide for being a person who studies ancient societies through excavation and artifacts, contributing immensely to historical research.

- Ans
- 1. Archivist
 - 2. Anthropologist
 - 3. Geologist
 - 4. Archaeologist

Question ID : 4410091742480
Option 1 ID : 4410096871594
Option 2 ID : 4410096871595
Option 3 ID : 4410096871593
Option 4 ID : 4410096871596
Status : Answered
Chosen Option : 4

Q.8 Select the option that expresses the given sentence in active voice.

The team was given a detailed briefing by Suhas.

- Ans
- 1. Suhas was given a detailed briefing by the team.
 - 2. The team gave Suhas a detailed briefing.
 - 3. Suhas gave the team a detailed briefing.
 - 4. A detailed briefing was given the team by Suhas.

Question ID : 4410091326569
Option 1 ID : 4410095237782
Option 2 ID : 4410095237783
Option 3 ID : 4410095237781
Option 4 ID : 4410095237780
Status : Answered
Chosen Option : 3

Q.9 Select the most appropriate option to fill in the blank.

I need to buy a car that uses ____ fuel than my current one.

- Ans
- 1. lesser
 - 2. fewer
 - 3. least
 - 4. less

Question ID : 4410091102984
Option 1 ID : 4410094349296
Option 2 ID : 4410094349295
Option 3 ID : 4410094349297
Option 4 ID : 4410094349294
Status : Answered
Chosen Option : 4

Q.10 Complete the sentence with the most appropriate option.

Although the evidence was strong, the lawyer skillfully ____ the prosecution's argument, leaving the jury in doubt.

- Ans
- 1. strengthened
 - 2. endorsed
 - 3. accepted
 - 4. refuted

Question ID : 4410091244209
Option 1 ID : 4410094910142
Option 2 ID : 4410094910144
Option 3 ID : 4410094910145
Option 4 ID : 4410094910143
Status : Answered
Chosen Option : 2

Q.11 Select the most appropriate option to fill in the blanks.

She wants to be ___ university professor, which requires ___ understanding of both teaching and research.

- Ans
- 1. a; a
 - 2. an; an
 - 3. a; an
 - 4. an; a

Question ID : 441009686133
Option 1 ID : 4410092698488
Option 2 ID : 4410092698491
Option 3 ID : 4410092698490
Option 4 ID : 4410092698489
Status : Answered
Chosen Option : 2

Q.12 In the following question, you are required to fill in the blank by choosing the word that best completes the sentence.

The aircraft flew _____ the tallest building in our town, its silver fuselage gleaming under the afternoon sun as it traced a steady course through the open expanse of the sky, momentarily casting a shadow upon the glass façade before disappearing into the horizon.

- Ans
- 1. up
 - 2. high
 - 3. over
 - 4. above

Question ID : 4410091432998
Option 1 ID : 4410095660566
Option 2 ID : 4410095660568
Option 3 ID : 4410095660569
Option 4 ID : 4410095660567
Status : Answered
Chosen Option : 4

Q.13 From the given options choose the one that suitably replaces the underlined segment of words.

After a long and bitter disagreement, the two companies decided to make peace and resolve the dispute and collaborate on a new project.

- Ans
- 1. to bite the Bullet
 - 2. to break the ice
 - 3. to bury the hatchet
 - 4. to fight like cat and dog

Question ID : 441009459498
Option 1 ID : 4410091796656
Option 2 ID : 4410091796655
Option 3 ID : 4410091796653
Option 4 ID : 4410091796654
Status : Answered
Chosen Option : 2

Q.14 Choose the correct indirect speech for the following: "Don't forget to lock the door when you leave," Ms.Clara, my roommate reminded me.
7052

- Ans
- 1. Ms.Clara, my roommate reminded me to not forget locking the door when I left.
 - 2. Ms.Clara, my roommate reminded me not forgetting to lock the door when I left.
 - 3. Ms.Clara, my roommate reminded me not to forget to lock the door when I left.
 - 4. Ms.Clara, my roommate reminded that I should not forget to lock the door when I left.

Question ID : 441009485591
Option 1 ID : 4410091897714
Option 2 ID : 4410091897713
Option 3 ID : 4410091897715
Option 4 ID : 4410091897716
Status : Answered
Chosen Option : 3

Q.15 Select the correct direct speech form of the given sentence.
He said that he would wash his hands.

- Ans
- 1. He said, "I will wash my hands".
 - 2. He said, "I may wash my hands".
 - 3. He said, "I would have been wash my hands".
 - 4. He said, "He will wash his hands".

Question ID : 4410091139437
Option 1 ID : 4410094492712
Option 2 ID : 4410094492713
Option 3 ID : 4410094492711
Option 4 ID : 4410094492714
Status : Answered
Chosen Option : 1

Q.16 Choose the sentence that is correctly written in past tense.

- Ans
- 1. He ran fast to catch the bus yesterday.
 - 2. He will run fast to catch the bus tomorrow.
 - 3. He is running fast to catch the bus.
 - 4. He runs fast to catch the bus.

Question ID : 4410091236183
Option 1 ID : 4410094878316
Option 2 ID : 4410094878315
Option 3 ID : 4410094878314
Option 4 ID : 4410094878313
Status : Answered
Chosen Option : 1

Q.17 Select the option that completes the sentence appropriately.

What ___ pleasure it was to see my cousins after such ___ long time!

- Ans
- 1. a, the
 - 2. a, an
 - 3. a, a
 - 4. the, a

Question ID : 4410091297661
Option 1 ID : 4410095122791
Option 2 ID : 4410095122789
Option 3 ID : 4410095122788
Option 4 ID : 4410095122790
Status : Answered
Chosen Option : 3

Q.18 Which of the following words means "One who studies the evolution of mankind"?

5228

- Ans
- 1. Biologist
 - 2. Archaeologist
 - 3. Anthropologist
 - 4. Historian

Question ID : 441009432884
Option 1 ID : 4410091691057
Option 2 ID : 4410091691056
Option 3 ID : 4410091691055
Option 4 ID : 4410091691054
Status : Answered
Chosen Option : 3

Q.19 Select the option which can replace the given group of words.

An animal that eats both plants and meat

- Ans
- 1. Omnivore
 - 2. Herbivore
 - 3. Piscivore
 - 4. Carnivore

Question ID : 4410091429717
Option 1 ID : 4410095647193
Option 2 ID : 4410095647194
Option 3 ID : 4410095647195
Option 4 ID : 4410095647192
Status : Answered
Chosen Option : 1

Q.20 Fill in the blank with the correct option.

The researcher was praised ___ her meticulous attention to detail and rigorous methodology.

- Ans
- 1. of
 - 2. by
 - 3. for
 - 4. with

Question ID : 4410091247264
Option 1 ID : 4410094922270
Option 2 ID : 4410094922271
Option 3 ID : 4410094922269
Option 4 ID : 4410094922272
Status : Answered
Chosen Option : 3

Q.21 Parts of a sentence are given below. While the first and the last parts (S1 and S6) are in the correct order, the parts in between are jumbled up. Arrange the parts in the correct order to form a meaningful sentence.

.S1- Despite mounting evidence of climate change,

P- citing economic concerns

Q- that prioritize industrial expansion

R- certain policymakers continue to question its severity

S- over environmental sustainability

S6: thereby delaying urgent mitigation efforts.

- Ans
- 1. QPRS
 - 2. PSRQ
 - 3. PRSQ
 - 4. RPQS

Question ID : 4410091739979
Option 1 ID : 4410096861466
Option 2 ID : 4410096861465
Option 3 ID : 4410096861464
Option 4 ID : 4410096861467
Status : Answered
Chosen Option : 4

Q.22 Select the option that can be used as a one-word substitute for the underlined phrase in the given sentence.

The policy encouraged a gradual recovery of health or strength after illness, ensuring proper medical supervision.

- Ans
- 1. Deterioration
 - 2. Convalescence
 - 3. Collapse
 - 4. Relapse

Question ID : 4410091742511
Option 1 ID : 4410096871718
Option 2 ID : 4410096871719
Option 3 ID : 4410096871720
Option 4 ID : 4410096871717
Status : Answered
Chosen Option : 2

Q.23 Choose the correct active form of the given sentence.

The train was expected to arrive at 11.30, but it was an hour late.

- Ans
- 1. People expect the train to arrive at 11.30, but it was an hour late.
 - 2. The passengers expect the train to arrive at 11.30, but it was an hour late.
 - 3. They expect the train to arrive at 11.30, but it is an hour late.
 - 4. Everyone expected the train to arrive at 11.30, but it was an hour late.

Question ID : 4410091235021
Option 1 ID : 4410094873820
Option 2 ID : 4410094873823
Option 3 ID : 4410094873821
Option 4 ID : 4410094873822
Status : Answered
Chosen Option : 4

Q.24 The theory was considered untenable after a series of contradictory experiments.

Choose the word that is most opposite in meaning to untenable as used in the sentence.

- Ans
- 1. Defensible
 - 2. Speculative
 - 3. Obsolete
 - 4. Fragile

Question ID : 441009487016
Option 1 ID : 4410091903488
Option 2 ID : 4410091903486
Option 3 ID : 4410091903489
Option 4 ID : 4410091903487
Status : Answered
Chosen Option : 3

Q.25 Choose the correct passive to active voice conversion option for the given sentence.
The building had been designed by a famous architect.

- Ans
- 1. A famous architect was designed the building.
 - 2. A famous architect have designed the building.
 - 3. A famous architect has been designed the building.
 - 4. A famous architect had designed the building.

Question ID : 44100995871
Option 1 ID : 441009381441
Option 2 ID : 441009381438
Option 3 ID : 441009381439
Option 4 ID : 441009381440
Status : Answered
Chosen Option : 4

Q.26 Identify the antonym for the highlighted word in the given sentence.

The witness gave a credible account of the events leading up to the accident.

- Ans
- 1. implausible
 - 2. tenable
 - 3. petty
 - 4. accurate

Question ID : 4410091155388
Option 1 ID : 4410094556268
Option 2 ID : 4410094556266
Option 3 ID : 4410094556267
Option 4 ID : 4410094556269
Status : Answered
Chosen Option : 1

Q.27 In the given question, a statement divided into different segments is given.
Rearrange all the segments to form a coherent statement.

Torn between what she felt (P) / She walked away slowly, (Q) / And what she knew to be right, (R) / Dragging the weight of her choice (S) / Like a reluctant shadow behind her (O)

- Ans
- 1. RPSQO
 - 2. PRSQO
 - 3. SRPQO
 - 4. QPRSO

Question ID : 441009460989
Option 1 ID : 4410091802653
Option 2 ID : 4410091802652
Option 3 ID : 4410091802655
Option 4 ID : 4410091802654
Status : Answered
Chosen Option : 2

Q.28 Select the most appropriate idiom that can substitute the underlined group of words.

The charity event was going so well that local businesses started participating by donating food and supplies.

- Ans
- 1. bit the bullet
 - 2. got into the act
 - 3. hit the sack
 - 4. broke the bank

Question ID : 441009640742
Option 1 ID : 4410092517121
Option 2 ID : 4410092517120
Option 3 ID : 4410092517122
Option 4 ID : 4410092517119
Status : Answered
Chosen Option : 2

Q.29 Select the most appropriate option that can substitute the underlined words in the given sentence.

There's no use dwelling and feeling sorry about what's already happened; we need to find a solution.⁴⁵⁵

- Ans
- 1. Coming out of the blue
 - 2. Crying over spilt milk
 - 3. Missing the boat
 - 4. Jumping on the bandwagon

Question ID : 4410091104162
Option 1 ID : 4410094354006
Option 2 ID : 4410094354008
Option 3 ID : 4410094354009
Option 4 ID : 4410094354007
Status : Answered
Chosen Option : 2

Q.30 From the given options choose the correct word to replace the incorrect adjective given in brackets.
The (austere) palace dazzled visitors with its grandeur, adorned with intricate gold filigree and precious jewels.

- Ans
- 1. constricted
 - 2. compact
 - 3. confined
 - 4. opulent

Question ID : 4410091102323
Option 1 ID : 4410094346653
Option 2 ID : 4410094346651
Option 3 ID : 4410094346652
Option 4 ID : 4410094346650
Status : Answered
Chosen Option : 4

Q.31 Choose the most appropriate antonym of the underlined word from the options given below.

His sartorial choices were always impeccable.

- Ans
- 1. frumpy
 - 2. elegant
 - 3. robust
 - 4. culinary

Question ID : 4410091129271
Option 1 ID : 4410094452618
Option 2 ID : 4410094452619
Option 3 ID : 4410094452621
Option 4 ID : 4410094452620
Status : Not Answered
Chosen Option : --

Q.32 Select the most appropriate option to fill in the blank.

They said, 'We _____ by next week.'

- Ans
- 1. can finish the work
 - 2. will finishing work
 - 3. will be finish the work
 - 4. could finished the work

Question ID : 4410091101833
Option 1 ID : 4410094344690
Option 2 ID : 4410094344692
Option 3 ID : 4410094344693
Option 4 ID : 4410094344691
Status : Answered
Chosen Option : 3

Q.33 Choose the best option that replaces the highlighted words in the sentence below.

The frustrated workers reminded management that eloquent assurances without concrete measures would never alleviate their grievances.

- Ans
- 1. all bark and no bite
 - 2. a guilty conscience needs no accuser
 - 3. one swallow does not make a summer
 - 4. fine words butter no parsnips

Question ID : 4410091269562
Option 1 ID : 4410095010589
Option 2 ID : 4410095010586
Option 3 ID : 4410095010588
Option 4 ID : 4410095010587
Status : Answered
Chosen Option : 3

Q.34 Select the appropriate antonym of the underlined word in the given sentence.

Her forbearance in responding to her son's declining academic commitment has deepened her insight into the challenges mothers face in motivating their children to engage meaningfully with their studies.

- Ans
- 1. Perseverance
 - 2. Endurance
 - 3. Impatience
 - 4. Abstinence

Question ID : 441009640108
Option 1 ID : 4410092514583
Option 2 ID : 4410092514580
Option 3 ID : 4410092514582
Option 4 ID : 4410092514581
Status : Answered
Chosen Option : 1

Q.35 Select the most appropriate word to replace the underlined segment in the sentence given below.

The vexatious problem still continues to confound the most experienced researcher.

- Ans
- 1. intriguing
 - 2. degrading
 - 3. perplexing
 - 4. beginning

Question ID : 4410091102905
 Option 1 ID : 4410094348980
 Option 2 ID : 4410094348979
 Option 3 ID : 4410094348978
 Option 4 ID : 4410094348981
 Status : Answered
 Chosen Option : 1

Comprehension:

Read the passage carefully and answer the questions that follow.

The terms 'Left' and 'Right' come from the seating arrangements in the National Assembly during the French Revolution, where the combatants used the medieval estate groupings to define their battle lines. According to their writings, land-owning aristocrats (the Second Estate) were the party of the Right, while the interests of nearly everyone else (the Third Estate) belonged to the Left. This Third Estate included peasants working for the landowners but also every other kind of business owner and worker. Decades later, Karl Marx offered a different analysis of capitalism: he put owners of both land and businesses together on one side (the bourgeoisie), while grouping workers from fields and factories on the other side (the proletariat) in a single, world-wide class struggle. The trouble with both these ways of parsing Left and Right is that voting patterns never seem to line up with class. Why, for example, do working-class conservatives appear to vote against their material interests, year in and year out, across generations?

The 18th-century philosopher and political theorist David Hume had answers to these questions. His essay 'Of Public Credit' (1752) was a warning about the dangers of Britain's increasing reliance on debt financing, his apocalyptic vision of the future turned out to describe some features of our current political map surprisingly well. Hume was writing because he believed that debt financing had the power to upend Europe's traditional power structure and culture by creating a new source of money divorced from tradition or responsibility: stocks and bonds.

SubQuestion No : 36

Q.36 Which of the following titles most accurately reflects the conceptual progression and focus of the passage?

- Ans
- 1. The French Revolution and the Birth of Capitalist Politics
 - 2. From Estates to Classes: The Historical Origins of Political Division
 - 3. Left and Right: Debt, Class, and the Limits of Political Labels
 - 4. Voting Against Interest: A Problem in Modern Democracy

Question ID : 4410091670833
 Option 1 ID : 4410096594087
 Option 2 ID : 4410096594084
 Option 3 ID : 4410096594085
 Option 4 ID : 4410096594086
 Status : Answered
 Chosen Option : 3

Comprehension:

Read the passage carefully and answer the questions that follow.

The terms 'Left' and 'Right' come from the seating arrangements in the National Assembly during the French Revolution, where the combatants used the medieval estate groupings to define their battle lines. According to their writings, land-owning aristocrats (the Second Estate) were the party of the Right, while the interests of nearly everyone else (the Third Estate) belonged to the Left. This Third Estate included peasants working for the landowners but also every other kind of business owner and worker. Decades later, Karl Marx offered a different analysis of capitalism: he put owners of both land and businesses together on one side (the bourgeoisie), while grouping workers from fields and factories on the other side (the proletariat) in a single, world-wide class struggle. The trouble with both these ways of parsing Left and Right is that voting patterns never seem to line up with class. Why, for example, do working-class conservatives appear to vote against their material interests, year in and year out, across generations?

The 18th-century philosopher and political theorist David Hume had answers to these questions. His essay 'Of Public Credit' (1752) was a warning about the dangers of Britain's increasing reliance on debt financing, his apocalyptic vision of the future turned out to describe some features of our current political map surprisingly well. Hume was writing because he believed that debt financing had the power to upend Europe's traditional power structure and culture by creating a new source of money divorced from tradition or responsibility: stocks and bonds.

SubQuestion No : 37

Q.37 Which of the following conveys the central theme of the passage?

- Ans**
- 1. How public debt destabilised Britain's eighteenth-century economy
 - 2. How aristocratic power was dismantled during the French Revolution
 - 3. Why modern political alignments fail to correspond neatly with class divisions
 - 4. Why Marx's theory of class struggle replaced earlier political models

Question ID : 4410091670834

Option 1 ID : 4410096594091

Option 2 ID : 4410096594089

Option 3 ID : 4410096594088

Option 4 ID : 4410096594090

Status : **Not Answered**

Chosen Option : --

Comprehension:

Read the passage carefully and answer the questions that follow.

The terms 'Left' and 'Right' come from the seating arrangements in the National Assembly during the French Revolution, where the combatants used the medieval estate groupings to define their battle lines. According to their writings, land-owning aristocrats (the Second Estate) were the party of the Right, while the interests of nearly everyone else (the Third Estate) belonged to the Left. This Third Estate included peasants working for the landowners but also every other kind of business owner and worker. Decades later, Karl Marx offered a different analysis of capitalism: he put owners of both land and businesses together on one side (the bourgeoisie), while grouping workers from fields and factories on the other side (the proletariat) in a single, world-wide class struggle. The trouble with both these ways of parsing Left and Right is that voting patterns never seem to line up with class. Why, for example, do working-class conservatives appear to vote against their material interests, year in and year out, across generations?

The 18th-century philosopher and political theorist David Hume had answers to these questions. His essay 'Of Public Credit' (1752) was a warning about the dangers of Britain's increasing reliance on debt financing, his apocalyptic vision of the future turned out to describe some features of our current political map surprisingly well. Hume was writing because he believed that debt financing had the power to upend Europe's traditional power structure and culture by creating a new source of money divorced from tradition or responsibility: stocks and bonds.

SubQuestion No : 38

Q.38 According to the passage, how did Karl Marx reclassify social groups differently from earlier Left-Right distinctions?

- Ans
- 1. He separated peasants from industrial workers.
 - 2. He aligned aristocrats with religious authorities.
 - 3. He grouped landowners and business owners.
 - 4. He defined political identity by voting behaviour.

Question ID : 4410091670835

Option 1 ID : 4410096594092

Option 2 ID : 4410096594093

Option 3 ID : 4410096594094

Option 4 ID : 4410096594095

Status : Answered

Chosen Option : 3

Comprehension:

Read the passage carefully and answer the questions that follow.

The terms 'Left' and 'Right' come from the seating arrangements in the National Assembly during the French Revolution, where the combatants used the medieval estate groupings to define their battle lines. According to their writings, land-owning aristocrats (the Second Estate) were the party of the Right, while the interests of nearly everyone else (the Third Estate) belonged to the Left. This Third Estate included peasants working for the landowners but also every other kind of business owner and worker. Decades later, Karl Marx offered a different analysis of capitalism: he put owners of both land and businesses together on one side (the bourgeoisie), while grouping workers from fields and factories on the other side (the proletariat) in a single, world-wide class struggle. The trouble with both these ways of parsing Left and Right is that voting patterns never seem to line up with class. Why, for example, do working-class conservatives appear to vote against their material interests, year in and year out, across generations?

The 18th-century philosopher and political theorist David Hume had answers to these questions. His essay 'Of Public Credit' (1752) was a warning about the dangers of Britain's increasing reliance on debt financing, his apocalyptic vision of the future turned out to describe some features of our current political map surprisingly well. Hume was writing because he believed that debt financing had the power to upend Europe's traditional power structure and culture by creating a new source of money divorced from tradition or responsibility: stocks and bonds.

SubQuestion No : 39

Q.39 What does the passage's discussion of working-class conservatives most strongly suggest?

- Ans
- 1. Electoral systems obscure genuine ideological commitments worldwide.
 - 2. Economic self-interest is an unreliable predictor of political behaviour.
 - 3. Marxist theory fails because capitalism has evolved since its inception.
 - 4. Class consciousness has declined due to capitalism and industrialisation.

Question ID : 4410091670836

Option 1 ID : 4410096594099

Option 2 ID : 4410096594096

Option 3 ID : 4410096594098

Option 4 ID : 4410096594097

Status : Not Answered

Chosen Option : --

Comprehension:

Read the passage carefully and answer the questions that follow.

The terms 'Left' and 'Right' come from the seating arrangements in the National Assembly during the French Revolution, where the combatants used the medieval estate groupings to define their battle lines. According to their writings, land-owning aristocrats (the Second Estate) were the party of the Right, while the interests of nearly everyone else (the Third Estate) belonged to the Left. This Third Estate included peasants working for the landowners but also every other kind of business owner and worker. Decades later, Karl Marx offered a different analysis of capitalism: he put owners of both land and businesses together on one side (the bourgeoisie), while grouping workers from fields and factories on the other side (the proletariat) in a single, world-wide class struggle. The trouble with both these ways of parsing Left and Right is that voting patterns never seem to line up with class. Why, for example, do working-class conservatives appear to vote against their material interests, year in and year out, across generations?

The 18th-century philosopher and political theorist David Hume had answers to these questions. His essay 'Of Public Credit' (1752) was a warning about the dangers of Britain's increasing reliance on debt financing, his apocalyptic vision of the future turned out to describe some features of our current political map surprisingly well. Hume was writing because he believed that debt financing had the power to upend Europe's traditional power structure and culture by creating a new source of money divorced from tradition or responsibility: stocks and bonds.

SubQuestion No : 40

Q.40 Which option best characterises the overall tone of the passage?

- Ans
- 1. Critical and revisionist
 - 2. Speculative and sceptical
 - 3. Polemical and ideologically committed
 - 4. Analytical and historically reflective

Question ID : 4410091670837

Option 1 ID : 4410096594100

Option 2 ID : 4410096594101

Option 3 ID : 4410096594102

Option 4 ID : 4410096594103

Status : Answered

Chosen Option : 4

Comprehension:

Read the passage and answer the questions that follow.

Money was created many times in many places. Its development required no technological breakthroughs – it was a purely mental revolution. It involved the creation of a new inter-subjective reality that exists solely in people's shared imagination. Money is not coins and banknotes. Money is anything that people are willing to use in order to represent systematically the value of other things for the purpose of exchanging goods and services. Money enables people to compare quickly and easily the value of different commodities (such as apples, shoes and divorces), to easily exchange one thing for another, and to store wealth conveniently. There have been many types of money. The most familiar is the coin, which is a standardised piece of imprinted metal. Yet money existed long before the invention of coinage, and cultures have prospered using other things as currency, such as shells, cattle, skins, salt, grain, beads, cloth and promissory notes. Cowry shells were used as money for about 4,000 years all over Africa, South Asia, East Asia and Oceania. Taxes could still be paid in cowry shells in British Uganda in the early twentieth century. In modern prisons and POW camps, cigarettes have often served as money. Even non-smoking prisoners have been willing to accept cigarettes in payment, and to calculate the value of all other goods and services in cigarettes. One Auschwitz survivor described the cigarette currency used in the camp: 'We had our own currency, whose value no one questioned: the cigarette.'

SubQuestion No : 41

Q.41 Identify the suitable title for the passage.

- Ans
- 1. Why Technology Was Necessary to Invent and Use Money
 - 2. How Cigarettes Became the Only True Form of Currency
 - 3. The Collapse of Modern Banking and World Economies
 - 4. The Evolution and Purpose of Money in Human Society

Question ID : 4410091534880

Option 1 ID : 4410096062765

Option 2 ID : 4410096062763

Option 3 ID : 4410096062766

Option 4 ID : 4410096062764

Status : Answered

Chosen Option : 4

Comprehension:

Read the passage and answer the questions that follow.

Money was created many times in many places. Its development required no technological breakthroughs – it was a purely mental revolution. It involved the creation of a new inter-subjective reality that exists solely in people's shared imagination. Money is not coins and banknotes. Money is anything that people are willing to use in order to represent systematically the value of other things for the purpose of exchanging goods and services. Money enables people to compare quickly and easily the value of different commodities (such as apples, shoes and divorces), to easily exchange one thing for another, and to store wealth conveniently. There have been many types of money. The most familiar is the coin, which is a standardised piece of imprinted metal. Yet money existed long before the invention of coinage, and cultures have prospered using other things as currency, such as shells, cattle, skins, salt, grain, beads, cloth and promissory notes. Cowry shells were used as money for about 4,000 years all over Africa, South Asia, East Asia and Oceania. Taxes could still be paid in cowry shells in British Uganda in the early twentieth century. In modern prisons and POW camps, cigarettes have often served as money. Even non-smoking prisoners have been willing to accept cigarettes in payment, and to calculate the value of all other goods and services in cigarettes. One Auschwitz survivor described the cigarette currency used in the camp: 'We had our own currency, whose value no one questioned: the cigarette.'

SubQuestion No : 42

Q.42 Identify the central theme of the passage.

- Ans**
- 1. The development of languages through contact with neighbours
 - 2. The emergence of myths that guided early religious practices
 - 3. The influence of politics on shaping different historical empires
 - 4. The evolution of money as a shared idea accepted across cultures

Question ID : 4410091534881

Option 1 ID : 4410096062768

Option 2 ID : 4410096062770

Option 3 ID : 4410096062767

Option 4 ID : 4410096062769

Status : Answered

Chosen Option : 4

Comprehension:

Read the passage and answer the questions that follow.

Money was created many times in many places. Its development required no technological breakthroughs – it was a purely mental revolution. It involved the creation of a new inter-subjective reality that exists solely in people's shared imagination. Money is not coins and banknotes. Money is anything that people are willing to use in order to represent systematically the value of other things for the purpose of exchanging goods and services. Money enables people to compare quickly and easily the value of different commodities (such as apples, shoes and divorces), to easily exchange one thing for another, and to store wealth conveniently. There have been many types of money. The most familiar is the coin, which is a standardised piece of imprinted metal. Yet money existed long before the invention of coinage, and cultures have prospered using other things as currency, such as shells, cattle, skins, salt, grain, beads, cloth and promissory notes. Cowry shells were used as money for about 4,000 years all over Africa, South Asia, East Asia and Oceania. Taxes could still be paid in cowry shells in British Uganda in the early twentieth century. In modern prisons and POW camps, cigarettes have often served as money. Even non-smoking prisoners have been willing to accept cigarettes in payment, and to calculate the value of all other goods and services in cigarettes. One Auschwitz survivor described the cigarette currency used in the camp: 'We had our own currency, whose value no one questioned: the cigarette.'

SubQuestion No : 43

Q.43 Identify the inferences drawn from the passage.

- Ans
- 1. Money functions properly only when technology continues to grow
 - 2. Money works effectively because people collectively trust its value
 - 3. Money gains meaning only when linked with powerful religious texts
 - 4. Money becomes stable only when rulers enforce strict legal codes

Question ID : 4410091534882

Option 1 ID : 4410096062772

Option 2 ID : 4410096062771

Option 3 ID : 4410096062774

Option 4 ID : 4410096062773

Status : Answered

Chosen Option : 2

Comprehension:

Read the passage and answer the questions that follow.

Money was created many times in many places. Its development required no technological breakthroughs – it was a purely mental revolution. It involved the creation of a new inter-subjective reality that exists solely in people's shared imagination. Money is not coins and banknotes. Money is anything that people are willing to use in order to represent systematically the value of other things for the purpose of exchanging goods and services. Money enables people to compare quickly and easily the value of different commodities (such as apples, shoes and divorces), to easily exchange one thing for another, and to store wealth conveniently. There have been many types of money. The most familiar is the coin, which is a standardised piece of imprinted metal. Yet money existed long before the invention of coinage, and cultures have prospered using other things as currency, such as shells, cattle, skins, salt, grain, beads, cloth and promissory notes. Cowry shells were used as money for about 4,000 years all over Africa, South Asia, East Asia and Oceania. Taxes could still be paid in cowry shells in British Uganda in the early twentieth century. In modern prisons and POW camps, cigarettes have often served as money. Even non-smoking prisoners have been willing to accept cigarettes in payment, and to calculate the value of all other goods and services in cigarettes. One Auschwitz survivor described the cigarette currency used in the camp: 'We had our own currency, whose value no one questioned: the cigarette.'

SubQuestion No : 44

Q.44 Identify the tone of the passage.

- Ans
- 1. Emotional and persuasive, appealing strongly to readers' beliefs
 - 2. Informative and analytical, explaining the concept with clarity
 - 3. Critical and doubtful, questioning all forms of social behaviour
 - 4. Humorous and casual, commenting playfully on human culture

Question ID : 4410091534883

Option 1 ID : 4410096062777

Option 2 ID : 4410096062778

Option 3 ID : 4410096062775

Option 4 ID : 4410096062776

Status : Answered

Chosen Option : 2

Comprehension:

Read the passage and answer the questions that follow.

Money was created many times in many places. Its development required no technological breakthroughs – it was a purely mental revolution. It involved the creation of a new inter-subjective reality that exists solely in people's shared imagination. Money is not coins and banknotes. Money is anything that people are willing to use in order to represent systematically the value of other things for the purpose of exchanging goods and services. Money enables people to compare quickly and easily the value of different commodities (such as apples, shoes and divorces), to easily exchange one thing for another, and to store wealth conveniently. There have been many types of money. The most familiar is the coin, which is a standardised piece of imprinted metal. Yet money existed long before the invention of coinage, and cultures have prospered using other things as currency, such as shells, cattle, skins, salt, grain, beads, cloth and promissory notes. Cowry shells were used as money for about 4,000 years all over Africa, South Asia, East Asia and Oceania. Taxes could still be paid in cowry shells in British Uganda in the early twentieth century. In modern prisons and POW camps, cigarettes have often served as money. Even non-smoking prisoners have been willing to accept cigarettes in payment, and to calculate the value of all other goods and services in cigarettes. One Auschwitz survivor described the cigarette currency used in the camp: 'We had our own currency, whose value no one questioned: the cigarette.'

SubQuestion No : 45

Q.45 The most appropriate connection of the passage to real-life situations is:

- Ans
- 1. Modern systems usually avoid using symbolic ideas in economics
 - 2. Modern communities always depend on natural items for currency
 - 3. Modern groups commonly prefer barter instead of using money
 - 4. Modern societies still rely on shared belief to give money its value

Question ID : 4410091534884

Option 1 ID : 4410096062781

Option 2 ID : 4410096062779

Option 3 ID : 4410096062782

Option 4 ID : 4410096062780

Status : Answered

Chosen Option : 4

Section : General Awareness Knowledge and Current Affairs Events

Q.1 As per the publication on Land Use Statistics for 2017-18, which state has the largest area under agricultural land in India?

- Ans
- 1. Rajasthan
 - 2. Maharashtra
 - 3. Uttar Pradesh
 - 4. Andhra Pradesh

Question ID : 441009327289

Option 1 ID : 4410091275507

Option 2 ID : 4410091275506

Option 3 ID : 4410091275509

Option 4 ID : 4410091275508

Status : Not Answered

Chosen Option : --

Q.2 What does the Preamble to the Constitution of India highlight as a means to achieve unity and integrity among India's diverse communities?

- Ans
- 1. Economic equality for all regions
 - 2. Promoting fraternity among all citizens
 - 3. Strict religious neutrality by the State
 - 4. Electoral representation of all communities

Question ID : 4410091634883
Option 1 ID : 4410096457577
Option 2 ID : 4410096457575
Option 3 ID : 4410096457578
Option 4 ID : 4410096457576
Status : Answered
Chosen Option : 2

Q.3 Foods that are considered part of the Sattvic diet are generally described as being:

- Ans
- 1. Highly processed and rich in spices
 - 2. Heavy and slow to digest
 - 3. Fast food items
 - 4. Light for digestion and mind-calming

Question ID : 4410091583566
Option 1 ID : 4410096255586
Option 2 ID : 4410096255584
Option 3 ID : 4410096255587
Option 4 ID : 4410096255585
Status : Answered
Chosen Option : 4

Q.4 Under which Article of the Indian Constitution can the President refer any matter to the Supreme Court for its advisory opinion?

- Ans
- 1. Article 124
 - 2. Article 226
 - 3. Article 136
 - 4. Article 143

Question ID : 441009311109
Option 1 ID : 4410091210933
Option 2 ID : 4410091210936
Option 3 ID : 4410091210935
Option 4 ID : 4410091210934
Status : Answered
Chosen Option : 4

Q.5 Which of the following regions in India are known for Wet Tropical Evergreen Vegetation?

- Ans
- 1. Thar Desert and Rann of Kutch
 - 2. Southern parts of Western Ghats and Northeastern Hills
 - 3. Indo-Gangetic Plains
 - 4. Punjab and Haryana

Question ID : 4410091340831
Option 1 ID : 4410095295363
Option 2 ID : 4410095295365
Option 3 ID : 4410095295366
Option 4 ID : 4410095295364
Status : Answered
Chosen Option : 2

Q.6 Who is the Bollywood star reuniting with director Anees Bazmee after 15 years for a new comedy film project?

- Ans
- 1. Salman Khan
 - 2. Shah Rukh Khan
 - 3. Ranveer Singh
 - 4. Akshay Kumar

Question ID : 4410091585341
Option 1 ID : 4410096262558
Option 2 ID : 4410096262559
Option 3 ID : 4410096262560
Option 4 ID : 4410096262557
Status : Not Answered
Chosen Option : --

Q.7 To maintain healthy tissue function, waste and harmful substances produced by cells must be removed regularly. Which fluid in the human body is responsible for eliminating cellular waste?

- Ans
- 1. Bile
 - 2. Saliva
 - 3. Lymph
 - 4. Tears

Question ID : 441009509571
Option 1 ID : 4410091993444
Option 2 ID : 4410091993443
Option 3 ID : 4410091993445
Option 4 ID : 4410091993442
Status : Answered
Chosen Option : 1

Q.8 Which wind instrument, used in both Hindustani and Carnatic music, is made of bamboo?

- Ans
- 1. Veena
 - 2. Sarangi
 - 3. Flute
 - 4. Shehnai

Question ID : 4410091185177
Option 1 ID : 4410094674879
Option 2 ID : 4410094674880
Option 3 ID : 4410094674878
Option 4 ID : 4410094674877
Status : Answered
Chosen Option : 3

Q.9 In December 2025, which award was conferred on Begum Parween Sultana for her outstanding contribution to Indian classical music?

- Ans
- 1. Sangeet Natak Akademi Award
 - 2. Padma Shri
 - 3. Aditya Vikram Birla Kalashikar Puraskar
 - 4. Bharat Ratna

Question ID : 4410091585266
Option 1 ID : 4410096262280
Option 2 ID : 4410096262277
Option 3 ID : 4410096262278
Option 4 ID : 4410096262279
Status : Answered
Chosen Option : 1

Q.10 Who is the head of the Ministry of Corporate Affairs as of 2024?

- Ans
- 1. Manohar Lal
 - 2. Nitin Jairam Gadkari
 - 3. Nirmala Sitharaman
 - 4. Shivraj Singh Chouhan

Question ID : 441009502704
Option 1 ID : 4410091965987
Option 2 ID : 4410091965989
Option 3 ID : 4410091965986
Option 4 ID : 4410091965988
Status : Answered
Chosen Option : 4

Q.11 Which city hosted the inauguration of the Bio-CNG and Fertilizer Plant by Banas Dairy in December 2025?

- Ans
- 1. Jaipur, Rajasthan
 - 2. Vav-Tharad, Gujarat
 - 3. Ranchi, Jharkhand
 - 4. Bhubaneswar, Odisha

Question ID : 4410091598809
Option 1 ID : 4410096315068
Option 2 ID : 4410096315065
Option 3 ID : 4410096315066
Option 4 ID : 4410096315067
Status : Not Answered
Chosen Option : --

Q.12 In 2025, India was set to host the 20th session of the Inter-governmental Committee for the Safeguarding of the Intangible Cultural Heritage at which historic site?

- Ans
- 1. Humayun's Tomb, New Delhi
 - 2. Qutub Minar, New Delhi
 - 3. Red Fort, New Delhi
 - 4. Purana Qila, New Delhi

Question ID : 4410091597694
Option 1 ID : 4410096310799
Option 2 ID : 4410096310798
Option 3 ID : 4410096310797
Option 4 ID : 4410096310800
Status : Answered
Chosen Option : 2

Q.13 Which platform, approved by the Cabinet in December 2025, aims to enable auction-based coal linkages for broader industrial use and exports?

- Ans
- 1. MineLink Portal
 - 2. CoalEase Platform
 - 3. CoalConnect Initiative
 - 4. CoalSETU window

Question ID : 4410091598806
Option 1 ID : 4410096315054
Option 2 ID : 4410096315055
Option 3 ID : 4410096315056
Option 4 ID : 4410096315053
Status : Not Answered
Chosen Option : --

Q.14 Which of the following sub-regions of the Great Indian Plains lies closest to the Himalayas?

- Ans
- 1. Bhangar
 - 2. Bhabar
 - 3. Terai
 - 4. Khadar

Question ID : 441009299009
Option 1 ID : 4410091163076
Option 2 ID : 4410091163074
Option 3 ID : 4410091163075
Option 4 ID : 4410091163077
Status : Not Answered
Chosen Option : --

Q.15 The safety-valve theory was used by Lala Lajpat Rai primarily to criticize—

- Ans
- 1. Indian Revolutionaries
 - 2. The British Government
 - 3. The Muslim League
 - 4. Indian Moderates in the Congress

Question ID : 4410091338184
Option 1 ID : 4410095284765
Option 2 ID : 4410095284763
Option 3 ID : 4410095284766
Option 4 ID : 4410095284764
Status : Answered
Chosen Option : 4

Q.16 Which city hosted the Badminton World Federation (BWF) World Junior Individual Championship 2025?

- Ans
- 1. Kolkata
 - 2. Chennai
 - 3. Mumbai
 - 4. Guwahati

Question ID : 4410091588075
Option 1 ID : 4410096273060
Option 2 ID : 4410096273059
Option 3 ID : 4410096273058
Option 4 ID : 4410096273057
Status : Not Answered
Chosen Option : --

Q.17 What is the status of a law declared unconstitutional by the Supreme Court?

- Ans
- 1. It is placed in the Concurrent List
 - 2. It is modified by the legislature
 - 3. It becomes a recommendation
 - 4. It becomes null and void

Question ID : 441009284079
Option 1 ID : 4410091103427
Option 2 ID : 4410091103425
Option 3 ID : 4410091103424
Option 4 ID : 4410091103426
Status : Answered
Chosen Option : 4

Q.18 Which classical Indian dance form, known for its fluid movements and devotional themes, originated in the eastern part of India?

- Ans
- 1. Manipuri
 - 2. Mohiniyattam
 - 3. Odissi
 - 4. Kathakali

Question ID : 4410091185119
Option 1 ID : 4410094674625
Option 2 ID : 4410094674626
Option 3 ID : 4410094674627
Option 4 ID : 4410094674628
Status : Answered
Chosen Option : 1

Q.19 Which among the following committees was instrumental in strengthening the Panchayati Raj system in India ?

- Ans
- 1. Ashok Gehlot Committee
 - 2. GVK Rao Committee
 - 3. Parmeshwaram Committee
 - 4. Nyaya Panchayat Committee

Question ID : 4410091088137
Option 1 ID : 4410094290051
Option 2 ID : 4410094290049
Option 3 ID : 4410094290048
Option 4 ID : 4410094290050
Status : Answered
Chosen Option : 2

Q.20 Which of the following is a Gandhian principle among the Directive Principles?

- Ans
- 1. Separation of judiciary from the executive
 - 2. Promotion of cottage industries in rural areas
 - 3. Equal pay for equal work
 - 4. Uniform civil code

Question ID : 441009327370
Option 1 ID : 4410091275833
Option 2 ID : 4410091275831
Option 3 ID : 4410091275830
Option 4 ID : 4410091275832
Status : Answered
Chosen Option : 2

Q.21 Which of the following options correctly states the year in which the Gram Nyayalayas Bill was enacted by the Parliament of India?

- Ans
- 1. 2008
 - 2. 2012
 - 3. 2006
 - 4. 2010

Question ID : 441009502720
Option 1 ID : 4410091966051
Option 2 ID : 4410091966053
Option 3 ID : 4410091966050
Option 4 ID : 4410091966052
Status : Not Answered
Chosen Option : --

Q.22 In which summit, held in 2025, was the Kuala Lumpur Declaration adopted reaffirming commitment to peace, stability, multilateralism, and regional co-operation?

- Ans
- 1. 8th Asia–Pacific Economic Co-operation Summit
 - 2. 25th Shanghai Co-operation Organization summits
 - 3. 20th East Asia Summit
 - 4. 20th ASEAN Summit

Question ID : 4410091597539
Option 1 ID : 4410096310204
Option 2 ID : 4410096310203
Option 3 ID : 4410096310201
Option 4 ID : 4410096310202
Status : Answered
Chosen Option : 2

Q.23 Which of the following Articles of the Constitution of India states the following?

"The Chairman and other members of a Public Service Commission shall be appointed, in the case of the Union Commission or a Joint Commission, by the President, and in the case of a State Commission, by the Governor of the State."

- Ans
- 1. Article 121
 - 2. Article 200
 - 3. Article 59
 - 4. Article 316

Question ID : 441009635260
Option 1 ID : 4410092495188
Option 2 ID : 4410092495189
Option 3 ID : 4410092495187
Option 4 ID : 4410092495190
Status : Not Answered
Chosen Option : --

Q.24 Which of the following rights was deleted from the list of Fundamental Rights by the 44th Amendment Act, 1978?

- Ans
- 1. Right to Equality
 - 2. Right to Property
 - 3. Right to Freedom
 - 4. Right to carry arms without license

Question ID : 4410091384481
Option 1 ID : 4410095468696
Option 2 ID : 4410095468698
Option 3 ID : 4410095468697
Option 4 ID : 4410095468699
Status : Answered
Chosen Option : 2

Q.25 Which among the following statements is INCORRECT related to the Schedules of Indian Constitution?

- Ans
- 1. The First Schedule lists the States and Union Territories.
 - 2. The Twelfth Schedule deals with the disqualification of members of Parliament and State Legislatures.
 - 3. Schedule Eighth deals with the 22 official languages recognized by the Constitution of India.
 - 4. The Third Schedule is related to forms of oaths and affirmations.

Question ID : 4410091087940
Option 1 ID : 4410094289287
Option 2 ID : 4410094289288
Option 3 ID : 4410094289290
Option 4 ID : 4410094289289
Status : Answered
Chosen Option : 2

Q.26 Which of the following Supreme Court cases held that the President's power under Article 72 is subject to limited judicial review?

- Ans
- 1. Shreya Singhal v. Union of India (2015)
 - 2. Maneka Gandhi v. Union of India (1978)
 - 3. Maru Ram v. Union of India (1980)
 - 4. Kesavananda Bharati v. State of Kerala (1973)

Question ID : 441009363752
Option 1 ID : 4410091421265
Option 2 ID : 4410091421264
Option 3 ID : 4410091421263
Option 4 ID : 4410091421262
Status : Not Answered
Chosen Option : --

Q.27 Who led the BRO team responsible for constructing the world's highest motorable road at Mig La Pass in 2025?

- Ans
- 1. Brigadier Manoj Joshi, the Commander of Northern Sector Engineering Wing
 - 2. Brigadier Vishal Srivastava, the Chief Engineer of Project Himank
 - 3. Colonel Arvind Chauhan, the Project Officer for Himalayan Development
 - 4. Major General Sanjeev Suri, the Director General of Border Roads

Question ID : 4410091118449
Option 1 ID : 4410094409683
Option 2 ID : 4410094409681
Option 3 ID : 4410094409682
Option 4 ID : 4410094409680
Status : Not Answered
Chosen Option : --

Q.28 Which authority in India is empowered to form a new state or alter the boundaries of an existing one?

- Ans
- 1. President with Cabinet approval
 - 2. Supreme Court
 - 3. Prime Minister
 - 4. Parliament of India

Question ID : 441009290119
Option 1 ID : 4410091127408
Option 2 ID : 4410091127407
Option 3 ID : 4410091127410
Option 4 ID : 4410091127409
Status : Answered
Chosen Option : 1

Q.29 Who won the ICC Cricket World Cup 2025 final, marking a historic maiden title victory?

- Ans
- 1. Australia
 - 2. South Africa
 - 3. New Zealand
 - 4. India

Question ID : 4410091118296
Option 1 ID : 4410094409069
Option 2 ID : 4410094409071
Option 3 ID : 4410094409068
Option 4 ID : 4410094409070
Status : Answered
Chosen Option : 4

Q.30 Which of the following was a significant source of information about the Mauryan Empire written by a Greek ambassador?

- Ans
- 1. Indica by Megasthenes
 - 2. Histories by Herodotus
 - 3. The Anabasis by Arrian
 - 4. The Periplus of the Erythraean Sea

Question ID : 441009311554
Option 1 ID : 4410091212636
Option 2 ID : 4410091212637
Option 3 ID : 4410091212639
Option 4 ID : 4410091212638
Status : Answered
Chosen Option : 1

Q.31 On November 13, 2025, India signed a Letter of Exchange amending the Protocol to the Treaty of Transit with which country?

- Ans
- 1. Nepal
 - 2. Bhutan
 - 3. Myanmar
 - 4. Bangladesh

Question ID : 4410091597516
Option 1 ID : 4410096310109
Option 2 ID : 4410096310111
Option 3 ID : 4410096310112
Option 4 ID : 4410096310110
Status : Not Answered
Chosen Option : --

Q.32 Which actor won the Best Actor award in a drama series at the Filmfare OTT Awards in December 2025 for Paatal Lok Season 2?

- Ans
- 1. Jaideep Ahlawat
 - 2. Rahul Bhatt
 - 3. Barun Sobti
 - 4. Abhishek Banerjee

Question ID : 4410091585881
Option 1 ID : 4410096264640
Option 2 ID : 4410096264642
Option 3 ID : 4410096264641
Option 4 ID : 4410096264643
Status : Answered
Chosen Option : 1

Q.33 Which mode of transport is most widely used in India for carrying goods and passengers?

- Ans
- 1. Airways
 - 2. Waterways
 - 3. Cable transport
 - 4. Roadways

Question ID : 4410091029425
Option 1 ID : 4410094069375
Option 2 ID : 4410094069374
Option 3 ID : 4410094069377
Option 4 ID : 4410094069376
Status : Answered
Chosen Option : 1

Q.34 The village assemblies during the Chola rule were known as:

- Ans
- 1. Sabha and Ur
 - 2. Mahasabha and Gana
 - 3. Gana and Panchayat
 - 4. Sabha and Sangha

Question ID : 441009312051
Option 1 ID : 4410091214646
Option 2 ID : 4410091214647
Option 3 ID : 4410091214648
Option 4 ID : 4410091214649
Status : Not Answered
Chosen Option : --

Q.35 Where did M K Gandhi launch his first hunger strike after returning from South Africa?

- Ans
- 1. Kheda
 - 2. Jallianwala Bagh
 - 3. Champaran
 - 4. Ahmedabad

Question ID : 4410091185713
Option 1 ID : 4410094677059
Option 2 ID : 4410094677062
Option 3 ID : 4410094677060
Option 4 ID : 4410094677061
Status : Answered
Chosen Option : 3

Q.36 What is the full form of CII, the organization that hosted EXCON 2025?

- Ans
- 1. Chamber of Indian Investments
 - 2. Council for Industrial Innovation
 - 3. Confederation of Indian Industry
 - 4. Central Industry Initiative

Question ID : 4410091584680
Option 1 ID : 4410096259948
Option 2 ID : 4410096259946
Option 3 ID : 4410096259945
Option 4 ID : 4410096259947
Status : Not Answered
Chosen Option : --

Q.37 Gir National Park is known for which animal?

- Ans
- 1. Asiatic Lion
 - 2. Tiger
 - 3. Rhinoceros
 - 4. Elephant

Question ID : 4410091364290
Option 1 ID : 4410095388975
Option 2 ID : 4410095388976
Option 3 ID : 4410095388978
Option 4 ID : 4410095388977
Status : Answered
Chosen Option : 2

Q.38 The popular folk song of North India, which is sung during childbirth, is called:

- Ans 1. Sohar
 2. Maand
 3. Wanawan
 4. Tikir

Question ID : 441009355999
Option 1 ID : 4410091390118
Option 2 ID : 4410091390117
Option 3 ID : 4410091390119
Option 4 ID : 4410091390116
Status : Answered
Chosen Option : 1

Q.39 When was the Sati Pratha abolished by the British government in India?

- Ans 1. 1829
 2. 1926
 3. 1826
 4. 1929

Question ID : 4410091224723
Option 1 ID : 4410094832365
Option 2 ID : 4410094832368
Option 3 ID : 4410094832367
Option 4 ID : 4410094832366
Status : Answered
Chosen Option : 1

Q.40 Which article of the Indian Constitution grants the High Court control over subordinate courts?

- Ans 1. Article 233
 2. Article 236
 3. Article 235
 4. Article 234

Question ID : 441009309102
Option 1 ID : 4410091203059
Option 2 ID : 4410091203062
Option 3 ID : 4410091203061
Option 4 ID : 4410091203060
Status : Not Answered
Chosen Option : --

Q.41 Article 243 E of the Indian Constitution is related to the:

- Ans
- 1. Constitution of finance commission at state level
 - 2. Duration of Panchayats
 - 3. Composition of Panchayats
 - 4. Disqualification of Panchayat Membership

Question ID : 4410091088418
Option 1 ID : 4410094291173
Option 2 ID : 4410094291175
Option 3 ID : 4410094291174
Option 4 ID : 4410094291172
Status : Answered
Chosen Option : 1

Q.42 In 2026, who set the record for presenting the highest number of consecutive Union Budgets in India?

- Ans
- 1. Nirmala Sitharaman
 - 2. Narendra Modi
 - 3. Amit Shah
 - 4. Rajnath Singh

Question ID : 4410091771387
Option 1 ID : 4410096985228
Option 2 ID : 4410096985229
Option 3 ID : 4410096985231
Option 4 ID : 4410096985230
Status : Not Answered
Chosen Option : --

Q.43 Which senior political leader from Maharashtra tragically died in a plane crash in January 2026?

- Ans
- 1. Sushma Swaraj
 - 2. Sharad Pawar
 - 3. Manohar Parrikar
 - 4. Ajit Pawar

Question ID : 4410091695500
Option 1 ID : 4410096688007
Option 2 ID : 4410096688008
Option 3 ID : 4410096688006
Option 4 ID : 4410096688005
Status : Answered
Chosen Option : 2

Q.44 What is the pH value of pure water at room temperature?

- Ans
- 1.0
 - 2.5
 - 3.6
 - 4.7

Question ID : 441009644632
Option 1 ID : 4410092532667
Option 2 ID : 4410092532668
Option 3 ID : 4410092532669
Option 4 ID : 4410092532670
Status : Answered
Chosen Option : 4

Q.45 Which edition of the Khelo India Youth Games (KIYG) officially began on May 4, 2025, with a virtual inauguration by Prime Minister Narendra Modi in Patna, Bihar?

- Ans
- 1.6th
 - 2.7th
 - 3.8th
 - 4.5th

Question ID : 4410091479333
Option 1 ID : 4410095844429
Option 2 ID : 4410095844430
Option 3 ID : 4410095844431
Option 4 ID : 4410095844428
Status : Not Answered
Chosen Option : --

Section : General Intelligence Reasoning Ability and Numerical Arithmetic Ability

Q.1 Rahul ranked 24th from the top and 57th from the bottom in his class. How many students are there in his class?

- Ans
- 1.82
 - 2.79
 - 3.81
 - 4.80

Question ID : 4410091393400
Option 1 ID : 4410095503236
Option 2 ID : 4410095503237
Option 3 ID : 4410095503235
Option 4 ID : 4410095503234
Status : Answered
Chosen Option : 3

Q.2 Select the triad which follows the same pattern as that followed by the two triads given below. Both triads follow the same pattern.

JQ-MS-NR
AH-DJ-EI2593

- Ans
- 1. DL-GM-HK
 - 2. DK-GM-HL
 - 3. EL-GM-HK
 - 4. EL-GN-HK

Question ID : 441009806002
Option 1 ID : 4410093178132
Option 2 ID : 4410093178131
Option 3 ID : 4410093178133
Option 4 ID : 4410093178134
Status : Answered
Chosen Option : 2

Q.3 Seven boxes P, Q, R, S, T, U and V are kept one over the other but not necessarily in the same order. Only four boxes are kept between P and Q. Only R is kept above P. Only two boxes are kept between U and T. V is kept immediately above S. T is not kept immediately above V. How many boxes are kept below T?

- Ans
- 1. 3
 - 2. 2
 - 3. 1
 - 4. 4

Question ID : 4410091393371
Option 1 ID : 4410095503124
Option 2 ID : 4410095503123
Option 3 ID : 4410095503122
Option 4 ID : 4410095503125
Status : Not Answered
Chosen Option : --

Q.4 Rohit started walking from a point G towards North. He walked 80 m and turned towards his right. He walked 60 m and turned towards his right. He walked 100 m and turned towards his left. He walked 60 m and turned towards his left. He walked 122 m and turned towards his left. He walked 120 m to reach a point K. How far and in which direction is point G from point K? (All turns are 90° turns only, unless specified.)

- Ans
- 1. 120 m ; South
 - 2. 102 m ; North
 - 3. 122 m ; North-west
 - 4. 102 m ; South

Question ID : 441009255606
Option 1 ID : 441009996332
Option 2 ID : 441009996334
Option 3 ID : 441009996335
Option 4 ID : 441009996333
Status : Not Answered
Chosen Option : --

Q.5 What should come in place of '?' in the given series?

2 2 4 14 ? 406

- Ans
- 1. 65
 - 2. 68
 - 3. 62
 - 4. 66

Question ID : 4410091267837
Option 1 ID : 4410095004042
Option 2 ID : 4410095004044
Option 3 ID : 4410095004041
Option 4 ID : 4410095004043
Status : Not Answered
Chosen Option : --

Q.6 Find the mean proportional of 22 and 198?

- Ans
- 1. 68
 - 2. 67
 - 3. 66
 - 4. 69

Question ID : 441009546713
Option 1 ID : 4410092142251
Option 2 ID : 4410092142249
Option 3 ID : 4410092142248
Option 4 ID : 4410092142250
Status : Answered
Chosen Option : 3

Q.7 What will come in the place of the question mark (?) in the following equation if '+' and '-' are interchanged and 'x' and '÷' are interchanged?
 $21 - 16 \times 8 + 3 \div 6 = ?$

Ans 1. 5

2. 4

3. 3

4. 2

Question ID : 4410091125437

Option 1 ID : 4410094437294

Option 2 ID : 4410094437293

Option 3 ID : 4410094437292

Option 4 ID : 4410094437291

Status : Answered

Chosen Option : 1

Q.8 Refer to the following letter-number-symbol series and answer the question.
Counting is to be done from left to right. All numbers are single-digit numbers.

(Left) V 3 J @ L # E Z T 3 G 4 4 4 E 2 & 3 C Y \$ G (Right)

How many such letters are there each of which is immediately preceded by a number and also immediately followed by a symbol?

Ans 1. Two

2. Three

3. One

4. Four

Question ID : 4410091269388

Option 1 ID : 4410095009926

Option 2 ID : 4410095009927

Option 3 ID : 4410095009925

Option 4 ID : 4410095009928

Status : Answered

Chosen Option : 3

Q.9 Based on the English alphabetical order, three of the following four letter cluster pairs are alike in a certain way and thus form a group. Which is the one that does not belong to that group? (Note: The odd one out is not based on the number of consonants/vowels or their position in the letter cluster.)

- Ans
- 1. MF - JS
 - 2. BU - YH
 - 3. XQ - UD
 - 4. HA - EM

Question ID : 441009808428
Option 1 ID : 4410093187835
Option 2 ID : 4410093187838
Option 3 ID : 4410093187837
Option 4 ID : 4410093187836
Status : Not Answered
Chosen Option : --

Q.10 If x is inversely proportional to y, and y = 8 when x = 10, then find the value of x, when y = 4.5846

- Ans
- 1. 16
 - 2. 20
 - 3. 30
 - 4. 12

Question ID : 441009899159
Option 1 ID : 4410093550709
Option 2 ID : 4410093550706
Option 3 ID : 4410093550707
Option 4 ID : 4410093550708
Status : Not Answered
Chosen Option : --

Q.11 Evaluate: $16 + 21 \div 3 - 3 \times 36$ 133

- Ans
- 1. 16
 - 2. 17
 - 3. 13
 - 4. 14

Question ID : 441009522417
Option 1 ID : 4410092045089
Option 2 ID : 4410092045090
Option 3 ID : 4410092045088
Option 4 ID : 4410092045087
Status : Answered
Chosen Option : 4

Q.12 Anil and Bhaskar, working separately, can do a piece of work in 9 days and 12 days, respectively. If they work on alternate days, beginning with Anil, then in how many days the work will be completed?

- Ans
- 1. 10
 - 2. 11
 - 3. $10\frac{1}{4}$
 - 4. $11\frac{1}{2}$

Question ID : 44100929545
 Option 1 ID : 441009117645
 Option 2 ID : 441009117646
 Option 3 ID : 441009117647
 Option 4 ID : 441009117648
 Status : Not Answered
 Chosen Option : --

Q.13 QM 13 is related to UP 17 in a certain way. In the same way, KG 19 is related to OJ 23. To which of the following is EA 14 related to following the same logic?7777

- Ans
- 1. ID 18
 - 2. HD 17
 - 3. HJ 18
 - 4. IJ 17

Question ID : 441009820301
 Option 1 ID : 4410093235329
 Option 2 ID : 4410093235330
 Option 3 ID : 4410093235327
 Option 4 ID : 4410093235328
 Status : Answered
 Chosen Option : 1

Q.14 Train A leaves station M at 7:40 a.m. and reaches station N at 4:40 p.m. on the same day. Train B leaves station N at 9:40 a.m. and reaches station M at 2:40 p.m. on the same day. Find the time when Trains A and B meet.

- Ans
- 1. 3:42 p.m.
 - 2. 12:10 p.m.
 - 3. 8:57 p.m.
 - 4. 7:26 p.m.

Question ID : 4410091108859
 Option 1 ID : 4410094372431
 Option 2 ID : 4410094372430
 Option 3 ID : 4410094372432
 Option 4 ID : 4410094372433
 Status : Not Answered
 Chosen Option : --

Q.15 If $36.1 : x :: x : 32.4$ and $x > 0$, then find the value of x .

- Ans
- 1. 34.2
 - 2. 38.8
 - 3. 31.9
 - 4. 37.7

Question ID : 441009313557
 Option 1 ID : 4410091220702
 Option 2 ID : 4410091220704
 Option 3 ID : 4410091220705
 Option 4 ID : 4410091220703
 Status : **Not Answered**
 Chosen Option : --

Q.16 What should come in place of the question mark (?) in the given series based on the English alphabetical order?

MDX PGT SJP ? YPH828

- Ans
- 1. XVR
 - 2. MNT
 - 3. MNY
 - 4. VML

Question ID : 4410091145623
 Option 1 ID : 4410094517449
 Option 2 ID : 4410094517451
 Option 3 ID : 4410094517448
 Option 4 ID : 4410094517450
 Status : **Answered**
 Chosen Option : 4

Q.17 A shopkeeper fixes the marked price of an item at 146% above its cost price. What percentage discount on the marked price should be allowed to make a profit of 23%?

2907

- Ans
- 1. 49%
 - 2. 51%
 - 3. 53%
 - 4. 50%

Question ID : 441009566481
 Option 1 ID : 4410092221047
 Option 2 ID : 4410092221045
 Option 3 ID : 4410092221046
 Option 4 ID : 4410092221044
 Status : **Not Answered**
 Chosen Option : --

Q.18 In an election between two candidates, 80% of the registered voters cast their vote and 10% of the votes polled were found invalid. Winning candidate got 55% of the valid votes and won the election by a margin of 234 votes. How many voters were registered?

- Ans
- 1. 3240
 - 2. 497
 - 3. 2002
 - 4. 3250

Question ID : 441009853275
Option 1 ID : 4410093366075
Option 2 ID : 4410093366073
Option 3 ID : 4410093366074
Option 4 ID : 4410093366072
Status : Not Answered
Chosen Option : --

Q.19 Sharad and Varad travel the same distance at the rate of 35 km per hour and 42 km per hour respectively. If Sharad takes 12 minutes longer than Varad, the distance travelled by each is:

- Ans
- 1. 38 km
 - 2. 42 km
 - 3. 37 km
 - 4. 34 km

Question ID : 441009549251
Option 1 ID : 4410092152401
Option 2 ID : 4410092152400
Option 3 ID : 4410092152402
Option 4 ID : 4410092152403
Status : Not Answered
Chosen Option : --

Q.20 A, B, C, D, P, Q and R are sitting around a circular table facing the centre of the table. Only two people are seated between D and P when counted from the right of D. Only two people are seated between P and C. Only three people are seated between D and R. A is seated to the immediate left of B. Who is seated third to the left of Q?

- Ans
- 1. B
 - 2. R
 - 3. A
 - 4. P

Question ID : 4410091269523
Option 1 ID : 4410095010435
Option 2 ID : 4410095010437
Option 3 ID : 4410095010434
Option 4 ID : 4410095010436
Status : Not Answered
Chosen Option : --

Q.21 A laptop is sold for ₹1,035 at a profit of 15%. What would have been the actual profit or loss on it, had it been sold for ₹870?

- Ans
- 1. ₹30 loss
 - 2. ₹70 loss
 - 3. ₹70 profit
 - 4. ₹30 profit

Question ID : 4410091107709
 Option 1 ID : 4410094367830
 Option 2 ID : 4410094367833
 Option 3 ID : 4410094367831
 Option 4 ID : 4410094367832
 Status : Not Answered
 Chosen Option : --

Q.22 An investment scheme offers 20% compound interest per annum, calculated on a half-yearly basis. A person deposits ₹6,600 each on 1 January and 1 July of a year. What is the total interest earned at the end of the year?

- Ans
- 1. ₹2046
 - 2. ₹2096
 - 3. ₹2168
 - 4. ₹2134

Question ID : 441009572767
 Option 1 ID : 4410092246188
 Option 2 ID : 4410092246189
 Option 3 ID : 4410092246191
 Option 4 ID : 4410092246190
 Status : Not Answered
 Chosen Option : --

Q.23 If 50% of a number exceeds 25% of it by 18, then the number is: 5067

- Ans
- 1. 52
 - 2. 92
 - 3. 72
 - 4. 112

Question ID : 441009856349
 Option 1 ID : 4410093378371
 Option 2 ID : 4410093378370
 Option 3 ID : 4410093378368
 Option 4 ID : 4410093378369
 Status : Not Answered
 Chosen Option : --

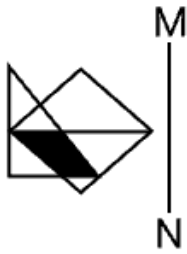
Q.24 Each of the digits in the number 15976832 is arranged in descending order from left to right. What will be the sum of the digits that are second from the left and second from the right in the new number thus formed?

- Ans
- 1. 12
 - 2. 11
 - 3. 10
 - 4. 8

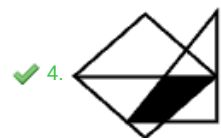
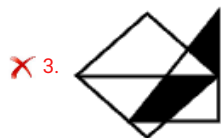
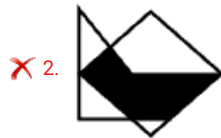
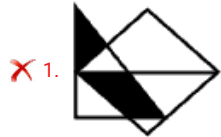
Question ID : 4410091126387
Option 1 ID : 4410094441094
Option 2 ID : 4410094441092
Option 3 ID : 4410094441091
Option 4 ID : 4410094441093
Status : Answered
Chosen Option : 3



Q.25 Select the correct mirror image of the given figure when the mirror is placed at MN as shown below.



Ans



Question ID : 4410091265015

Option 1 ID : 4410094992990

Option 2 ID : 4410094992988

Option 3 ID : 4410094992989

Option 4 ID : 4410094992991

Status : Answered

Chosen Option : 4

Q.26 Below are given two sets of numbers. In each set of numbers, a certain mathematical operation on first number results in the second number. Similarly, certain mathematical operation on the second number results in the third number and so on. Which of the given options follows the same set of operations as in question?

(NOTE: A two/three-digit number cannot be broken into individual digits for operations, e.g., if 37 is followed by 10, the operation cannot be $3+7$ as a two-digit number cannot be broken into individual digits.)

47 - 59 - 71 - 95

62 - 74 - 86 - 110454

- Ans
- 1. 66 - 78 - 90 - 104
 - 2. 79 - 91 - 103 - 139
 - 3. 53 - 65 - 77 - 89
 - 4. 32 - 44 - 56 - 80

Question ID : 441009844498
Option 1 ID : 4410093330858
Option 2 ID : 4410093330859
Option 3 ID : 4410093330857
Option 4 ID : 4410093330856
Status : Answered
Chosen Option : 4

Q.27 In a certain code language, 'BIRD' is coded as '3751' and 'TABS' is coded as '4368'. What is the code for 'B' in the given code language?

- Ans
- 1. 6
 - 2. 3
 - 3. 4
 - 4. 8

Question ID : 441009908020
Option 1 ID : 4410093585890
Option 2 ID : 4410093585888
Option 3 ID : 4410093585889
Option 4 ID : 4410093585891
Status : Answered
Chosen Option : 2

Q.28 A trader gives successive discounts of 18%, 8% and 21%, respectively. The percentage of the marked price he will recover is:
(Round off your answer to two decimal places)

- Ans
- 1. 58.65%
 - 2. 61.17%
 - 3. 68.35%
 - 4. 59.60%

Question ID : 441009894284
Option 1 ID : 4410093531209
Option 2 ID : 4410093531208
Option 3 ID : 4410093531207
Option 4 ID : 4410093531206
Status : Not Answered
Chosen Option : --

Q.29 A shopkeeper bought six identical mobile phones for ₹42,000 and sold two of them for ₹28,000. Find the gain percentage.

- Ans
- 1. 200%
 - 2. 100%
 - 3. 50%
 - 4. 150%

Question ID : 441009577579
Option 1 ID : 4410092265445
Option 2 ID : 4410092265442
Option 3 ID : 4410092265444
Option 4 ID : 4410092265443
Status : Answered
Chosen Option : 3

Q.30 Ashish invested ₹1680 at 3% per annum simple interest in a bank. What amount (in ₹) will he get after 5 years?⁵¹⁰²

- Ans
- 1. 352
 - 2. 252
 - 3. 1832
 - 4. 1932

Question ID : 441009568676
Option 1 ID : 4410092229827
Option 2 ID : 4410092229825
Option 3 ID : 4410092229826
Option 4 ID : 4410092229824
Status : Answered
Chosen Option : 4