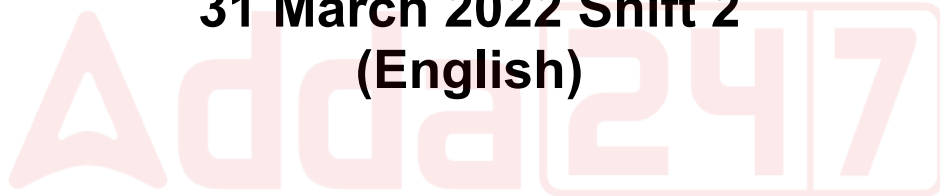


FSSAI Assistant

**Previous Year Paper
31 March 2022 Shift 2
(English)**



Adda247

Test Prime

ALL EXAMS, ONE SUBSCRIPTION



1,00,000+
Mock Tests



**Personalised
Report Card**



**Unlimited
Re-Attempt**



600+
Exam Covered



25,000+ Previous
Year Papers



500%
Refund



ATTEMPT FREE MOCK NOW

FOOD SAFETY AND STANDARDS
AUTHORITY OF INDIA*Inspiring Trust, Assuring Safe & Nutritious Food*
Ministry of Health and Family Welfare, Government of India

Participant ID	
Participant Name	
Test Center Name	
Test Date	31/03/2022
Test Time	2:00 PM - 5:00 PM
Subject	Assistant

Section : General Intelligence

Q.1 Select the option that is related to the third letter number cluster in the same way as the second letter number cluster is related to the first letter number cluster.

SG9 : PD18 :: MW7 : ?

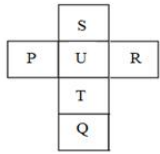
- Ans
- 1. KT14
 - 2. JS18
 - 3. JT14
 - 4. KS12

Question ID : 7773935944

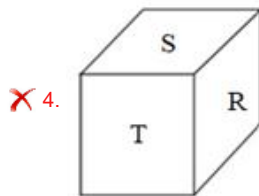
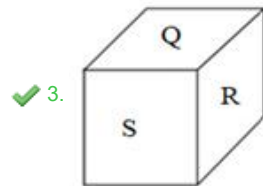
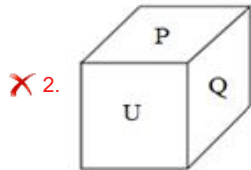
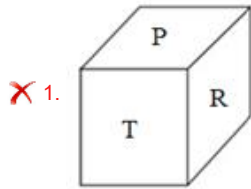
Status : Answered

Chosen Option : 3

Q.2 Choose from the four answer figures the figure that will be formed when question figure is folded into a box.



Ans



Question ID : 7773935961
Status : Answered
Chosen Option : 3

Q.3 Seven friends A, B, C, D, E, F and G are sitting around a circular table facing towards the center. C and D are not the immediate neighbor of E. F is sitting second to the left of A and third to the right of C. D is sitting immediately left of F and immediately right of B. Who is sitting second to the left of G?

Ans ✗ 1. D

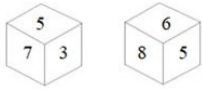
✗ 2. C

✓ 3. E

✗ 4. F

Question ID : 7773935953
Status : Answered
Chosen Option : 3

Q.4 Six numbers 3, 4, 5, 6, 7 and 8 are written on different faces of a dice. Two positions of this dice are shown in the figure. Find the sum of number 6 and the number on its opposite face?



- Ans**
- 1. 10
 - 2. 13
 - 3. 12
 - 4. 14

Question ID : 7773935962
Status : Answered
Chosen Option : 2

Q.5 Four number-triads have been given, out of which three are alike in some manner and one is different. Select the number-triad that is different.

- Ans**
- 1. (128, 27, 101)
 - 2. (168, 45, 127)
 - 3. (136, 33, 103)
 - 4. (154, 39, 115)

Question ID : 7773935956
Status : Answered
Chosen Option : 2

Q.6 There are five friends L, M, N, O and P each having different height. Only two friends are taller than M. L is tallest among all. P is shorter than M, but taller than N. Who is the shortest among the five friends ?

- Ans**
- 1. M
 - 2. P
 - 3. O
 - 4. N

Question ID : 7773935954
Status : Answered
Chosen Option : 4

Q.7 Four number-pairs have been given, out of which three are alike in some manner and one is different. Select the number-pair that is different.

- Ans**
- 1. 56 : 30
 - 2. 74 : 28
 - 3. 38 : 26
 - 4. 26 : 12

Question ID : 7773935955
Status : Answered
Chosen Option : 2

Q.8 In a code language, 'MANGO' is coded as PCQIR and 'LEMON' is coded as OGPQQ.
How will 'APPLE' be coded in the same language?

- Ans
- 1. CRRNG
 - 2. DRSNH
 - 3. DRSMG
 - 4. CRSOG

Question ID : 7773935952
Status : Answered
Chosen Option : 3

Q.9 Select the option that is related to the third number in the same way as the second number is related to the first number and sixth number is related to fifth number.

234 : 29 :: 219 : ? :: 217 : 54

- Ans
- 1. 86
 - 2. 37
 - 3. 23
 - 4. 59

Question ID : 7773935947
Status : Answered
Chosen Option : 2

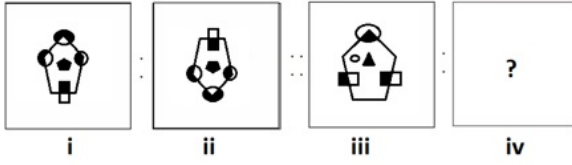
Q.10 In a certain code If '@' means 'addition', '&' means 'multiplication', '\$' means 'division' and '#' means 'subtraction', then find the value of:

198 \$ 9 & 2 @ 11 # 9 = ?

- Ans
- 1. 13
 - 2. 46
 - 3. 24
 - 4. 53

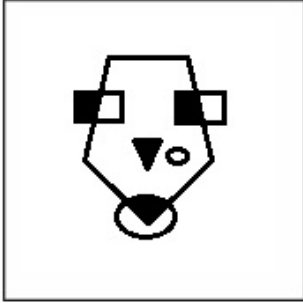
Question ID : 7773935945
Status : Answered
Chosen Option : 2

Q.11 In the following question, the figure (i) is related to figure (ii) in some way, choose the alternative which is similarly related to the figure (iii).

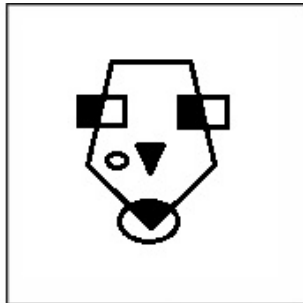


Ans

✗ 1.



✓ 2.



✗ 3.



✗ 4.



Question ID : 7773935957
 Status : Answered
 Chosen Option : 2

Q.12 Select the option that is related to the third letter cluster in the same way as the second letter cluster is related to the first letter cluster.

MGKL : MMJQ :: STFY : ?

- Ans
- 1. YGXX
 - 2. YHXW
 - 3. ZHWW
 - 4. ZGWX

Question ID : 7773935943
 Status : Answered
 Chosen Option : 1

Q.13 In this question, a matrix of certain numbers is given. These numbers follow a certain trend, row-wise or column-wise. Find out this trend and choose the missing number from the given alternatives.

4	7	5
8	9	8
3	5	4
23	38	?

- Ans
- 1. 32
 - 2. 38
 - 3. 45
 - 4. 24

Question ID : 7773935949
 Status : Answered
 Chosen Option : 4

Q.14 Select the option that is related to the third number in the same way as the second number is related to the first number and sixth number is related to fifth number.

14 : 84 :: 18 : ? :: 21 : 126

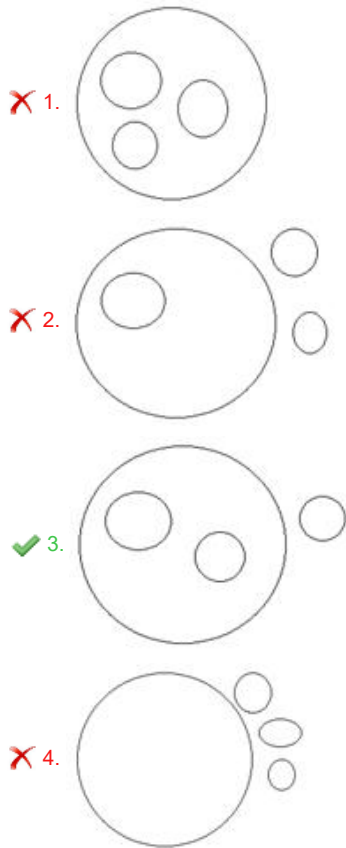
- Ans
- 1. 102
 - 2. 112
 - 3. 96
 - 4. 108

Question ID : 7773935948
 Status : Answered
 Chosen Option : 4

Q.15 Which diagram best represents the relation between:

Language, Tamil, Devnagari, Kannad

Ans



Question ID : 7773935959
Status : Answered
Chosen Option : 1

Q.16 Letters of a word are jumbled and each letter has been given a unique number. Select the combination of numbers so that letters arranged accordingly will form the meaningful word.

I	A	C	N	B
1	2	3	4	5

- Ans
- 1. 12345
 - 2. 53124
 - 3. 24513
 - 4. 32514

Question ID : 7773935950
Status : Answered
Chosen Option : 4

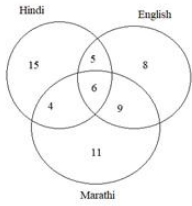
Q.17 Which two signs should be interchanged to make the given equation correct?

$$126 - 14 \times 9 \div 3 + 7 = 85$$

- Ans
- 1. - and +
 - 2. + and -
 - 3. ÷ and +
 - 4. x and ÷

Question ID : 7773935946
Status : Not Attempted and Marked For Review
Chosen Option : --

Q.18 The diagram given below represents the number of persons in a society who read newspapers of different languages: English, Hindi and Marathi. Study the diagram and answer the question that follows.



Which number represents the number of persons in the society who read both Hindi and Marathi newspapers but not English?

- Ans**
- 1. 9
 - 2. 5
 - 3. 4
 - 4. 6

Question ID : 7773935960
Status : Answered
Chosen Option : 3

Q.19 Mahesh is father's father of Radhika. Suresh is the brother of Nilesh. Radhika is the daughter of Nilesh. Gunjan is the wife of Nilesh. How is Gunjan related to Mahesh?

- Ans**
- 1. Grand-daughter
 - 2. Sister-in-law
 - 3. Daughter
 - 4. Daughter-in-law

Question ID : 7773935958
Status : Answered
Chosen Option : 4

Q.20 In a code language, 'INDIA IS OUR COUNTRY' is coded as 5237 and 'WE ARE INDIANS' is coded as 237. How will 'I LOVE MY COUNTRY' be coded in the same language?

- Ans**
- 1. 4172
 - 2. 1427
 - 3. 4327
 - 4. 3472

Question ID : 7773935951
Status : Answered
Chosen Option : 2

Section : Quantitative Aptitude

Q.1 The whole number occurs just before 100000 is:

- Ans**
- 1. 99998
 - 2. 99997
 - 3. 99996
 - 4. 99999

Question ID : 7773935963
Status : Answered
Chosen Option : 4

Q.2 41 girls can complete a piece of work in 40 days. If x girls started the work and after 30 days 64 more girls joined them so that the whole work gets finished in the desired time, find the value of x .

- Ans
- 1. 23
 - 2. 22
 - 3. 24
 - 4. 25

Question ID : 7773935971

Status : Answered

Chosen Option : 4

Q.3 The monthly income of Hrithik is Rs. 50,000. 20% of his income spent in giving the house rent. He spends 35% of the total salary on other expenditure and then he saves the rest amount. If this follows for a year, then what will be his savings per annum.

- Ans
- 1. Rs. 2,70,600
 - 2. Rs. 2,67,300
 - 3. Rs. 2,70,000
 - 4. Rs. 2,77,400

Question ID : 7773935978

Status : Answered

Chosen Option : 3

Q.4 In the given below options which is the largest fraction?

- Ans
- 1. $\frac{2}{9}$
 - 2. $\frac{6}{8}$
 - 3. $\frac{7}{8}$
 - 4. $\frac{4}{5}$

Question ID : 7773935964

Status : Answered

Chosen Option : 3

Q.5 The ratio of radii of two cylinders 'G' and 'H' are in the ratio 11:9 respectively while the ratio of their heights 8:7. The curved surface area of the smaller cylinder is how much percent less than the larger one.

- Ans
- 1. $\frac{625}{22}$ percent
 - 2. $\frac{535}{22}$ percent
 - 3. $\frac{525}{22}$ percent
 - 4. $\frac{425}{22}$ percent

Question ID : 7773935974

Status : Not Answered

Chosen Option : --

Q.6 A mixture of 170 ml contains vinegar oil and olive oil in the ratio of 6 : 11 respectively. If 70 ml of vinegar oil is added into it, then what will be the ratio of vinegar oil and olive oil in the new mixture?

- Ans
- 1. 12 : 11
 - 2. 13 : 14
 - 3. 13 : 11
 - 4. 13 : 10

Question ID : 7773935969
Status : Answered
Chosen Option : 3

Q.7 Area of isosceles triangle is $2\sqrt{12}$ sq cm. What will be the base of a triangle if the height of the triangle is 12cm.

- Ans
- 1. $\frac{\sqrt{14}}{3}$ cm
 - 2. $\frac{\sqrt{12}}{3}$ cm
 - 3. $\frac{\sqrt{11}}{3}$ cm
 - 4. $\frac{\sqrt{10}}{3}$ cm

Question ID : 7773935965
Status : Answered
Chosen Option : 2

Q.8 Ronit and Hrithik can complete a work in 15 days and 35 days respectively. Hrithik started the work alone and joined by Ronit after the completion of $\frac{2}{5}$ of the work. Find the time taken to complete the work in this way:

- Ans
- 1. 21.3 days
 - 2. 19.3 days
 - 3. 20.3 days
 - 4. 22.3 days

Question ID : 7773935973
Status : Answered
Chosen Option : 4

Q.9 What will be the square root of $a\sqrt{2}$?

- Ans
- 1. $\sqrt{a\sqrt{2}}/2$
 - 2. $\sqrt{1\sqrt{2+a}}$
 - 3. $\sqrt{a\sqrt{2}}$
 - 4. $\sqrt{1\sqrt{a}}/3$

Question ID : 7773935967
Status : Answered
Chosen Option : 1

Q.10 Sobhit has purchased an article from Ronita at a discount of 10%. Still, Ronita earned a profit of Rs. 610 because the article was marked up by 350% above its cost price. Find the value of discount offered by Ronita.

- Ans
- 1. Rs. 96
 - 2. Rs. 93
 - 3. Rs.90
 - 4. Rs. 94

Question ID : 7773935982

Status : Not Attempted and Marked For Review

Chosen Option : --

Q.11 Ronita marked an article $z\%$ above its CP, and then after giving a discount of 10%, sold it at Rs. 630. If the respective ratio of cost price and selling price of that article is 7:9, then find the value of z .

- Ans
- 1. 330/11%
 - 2. 300/7%
 - 3. 400/7%
 - 4. 300/11%

Question ID : 7773935980

Status : Answered

Chosen Option : 2

Q.12 What will be the fourth term, if first three terms of the proportion are 4, 12, 15.

- Ans
- 1. 45
 - 2. 35
 - 3. 46
 - 4. 36

Question ID : 7773935966

Status : Answered

Chosen Option : 1

Q.13 Gargi and Tanisha started a business by investing a total of Rs. 46000 such that Gargi withdrew her sum after 9 months. If the ratio of profit received by Gargi and Tanisha after 1.5 years is 7:32 respectively, then find the sum invested by Gargi.

- Ans
- 1. Rs 14200
 - 2. Rs 14400
 - 3. Rs 14300
 - 4. Rs 14000

Question ID : 7773935976

Status : Not Attempted and Marked For Review

Chosen Option : --

Q.14 Train K moving with a speed of 30 km/h can cross a pole in 15 seconds while train K can cross train J coming from the opposite side with a speed of 30 km/h in $102/5$ seconds. Find the length of train J. (In m)

- Ans
- 1. 217 m
 - 2. 215 m
 - 3. 214 m
 - 4. 216 m

Question ID : 7773935970

Status : Not Answered

Chosen Option : --

Q.15 Age of Prakriti is 6 times the age of her daughter. Find the present age of Prakriti, if 6 years ago she was 6 more than the 10 times of her daughter's age.

- Ans
- 1. 73 years
 - 2. 70 years
 - 3. 72 years
 - 4. 71 years

Question ID : 7773935979

Status : Not Answered

Chosen Option : --

Q.16 Prakriti has Rs. 12000 with her. She invested some amount in scheme R offering a SI of 15% pa and rest in scheme S offering a SI of 20% pa. If total interest received by her at the end of 3 years is Rs. 6600, then find the amount invested in scheme R.

- Ans
- 1. Rs 7000
 - 2. Rs 6000
 - 3. Rs 4000
 - 4. Rs 5000

Question ID : 7773935968

Status : Answered

Chosen Option : 1

Q.17 Rohit sold a TV at a gain of 20%. Had it been sold at Rs.104 more, then the gain would have been 24%. Find the CP (cost price) of TV.

- Ans
- 1. Rs 2500
 - 2. Rs 2600
 - 3. Rs 2700
 - 4. Rs 2400

Question ID : 7773935981

Status : Not Attempted and Marked For Review

Chosen Option : --

Q.18 If the sum of two positive integers is 27 and the difference of their square is 81, then find the difference of those numbers (subtract lesser number from the greater one).

- Ans
- 1. 2
 - 2. 4
 - 3. 3
 - 4. 1

Question ID : 7773935977

Status : **Not Attempted and Marked For Review**

Chosen Option : --

Q.19 The area of the rectangle is equal to the area of the square having side $5\sqrt{3}$ cm. If the ratio of length and breadth of a rectangle is 3:1 then what will be the perimeter of a rectangle.

- Ans
- 1. 41 cm
 - 2. 45 cm
 - 3. 46 cm
 - 4. 40 cm

Question ID : 7773935975

Status : **Answered**

Chosen Option : 4

Q.20 Rajat started a work alone and left after 10 days leaving 75% of the work for Simran. If Simran can complete the remaining work in 30 days, then find the time taken by Rajat and Simran together to complete 45% of the work.

- Ans
- 1. 13 days
 - 2. 9 days
 - 3. 17 days
 - 4. 11 days

Question ID : 7773935972

Status : **Not Attempted and Marked For Review**

Chosen Option : --

Section : English Language

Q.1 Select the most appropriate option to fill in the blank.

Let us choose one of the new methods of teaching and see _____ effect on our children.

- Ans
- 1. its
 - 2. their
 - 3. one's
 - 4. his

Question ID : 7773935992

Status : **Answered**

Chosen Option : 1

Q.2 Select the most appropriate option to fill in the blank.

He requires _____ assistant with _____ good knowledge of English.

- Ans
- 1. a ; a
 - 2. an ; a
 - 3. an ; the
 - 4. the ; the

Question ID : 7773935983
Status : Answered
Chosen Option : 3

Q.3 Select the most appropriate option to fill in the blank.

I have had a letter _____ Prateek _____ Monday. He is fine.

- Ans
- 1. of ; in
 - 2. from ; on
 - 3. of ; over
 - 4. from ; in

Question ID : 7773935984
Status : Answered
Chosen Option : 2

Q.4 Identify the segment in the sentence which contains a grammatical error.

He has been wearing the same shirt from the last week.

- Ans
- 1. He has been
 - 2. from the last week.
 - 3. wearing the
 - 4. same shirt

Question ID : 7773935990
Status : Answered
Chosen Option : 1

Q.5 Select the most appropriate antonym of the given word.

DISREGARD

- Ans
- 1. Care
 - 2. Ignore
 - 3. Neglect
 - 4. Discount

Question ID : 7773935987
Status : Answered
Chosen Option : 3

Q.6 Select the most appropriate word for the given group of words.

A group of people who have the same job or interest

- Ans
- 1. Identity
 - 2. Amenity
 - 3. Immunity
 - 4. Fraternity

Question ID : 7773935988
Status : Answered
Chosen Option : 3

Q.7 Select the wrongly spelt word.

- Ans
- 1. illuision
 - 2. illicit
 - 3. illegitimate
 - 4. illegible

Question ID : 7773935989
Status : Answered
Chosen Option : 1

Q.8 Identify the segment in the sentence which contains a grammatical error.

He finished to read such a thick book in only two days.

- Ans
- 1. in only two days
 - 2. to read
 - 3. He finished
 - 4. such a thick book

Question ID : 7773935991
Status : Answered
Chosen Option : 2

Q.9 Select the most appropriate synonym of the given word.

RELUCTANT

- Ans
- 1. Hesitant
 - 2. Confident
 - 3. Pleased
 - 4. Ready

Question ID : 7773935985
Status : Answered
Chosen Option : 1

Q.10 Select the most appropriate antonym of the given word.

MOIST

- Ans
- 1. Humid
 - 2. Dry
 - 3. Damp
 - 4. Wet

Question ID : 7773935986
Status : Answered
Chosen Option : 2

Section : General Awareness

Q.1 What is the Indian agriculture's predominant type?

- Ans
- 1. Commercial agriculture
 - 2. Extensive agriculture
 - 3. Plantation agriculture
 - 4. Subsistence agriculture

Question ID : 7773935996
Status : Answered
Chosen Option : 3

Q.2 In India, the service tax was introduced first time in:

- Ans
- 1. 1992
 - 2. 1995
 - 3. 1993
 - 4. 1994

Question ID : 7773936004
Status : Not Answered
Chosen Option : --

Q.3 In which one among the following Articles the amending power of the Constitution of India is described?

- Ans
- 1. Article 395
 - 2. Article 268
 - 3. Article 368
 - 4. Article 360

Question ID : 7773935998
Status : Not Answered
Chosen Option : --

Q.4 Which of the following is a literary award?

- Ans
- 1. Jnanpith award
 - 2. Dronacharya Awards
 - 3. Nehru Award
 - 4. R. D. Birla Award

Question ID : 7773936012
Status : Answered
Chosen Option : 2

Q.5 In which part of the Indian Constitution, the Directive Principles of State Policy are contained?

- Ans
- 1. Part IV
 - 2. Part VII
 - 3. Part III
 - 4. Part I

Question ID : 7773935997
Status : Not Answered
Chosen Option : --

Q.6 Which of the following workers is considered as a regular salaried employee?

- Ans
- 1. Rickshaw puller
 - 2. Owner of a saloon
 - 3. Vegetable vendor
 - 4. Cashier in State Bank of India

Question ID : 7773936005
Status : Answered
Chosen Option : 4

Q.7 Which basic constitutional rights is curtailed by the Preventive Detention Act?

- Ans
- 1. Right to Freedom.
 - 2. Right to Constitutional Remedies.
 - 3. Right to Freedom of Religion.
 - 4. Right to Equality.

Question ID : 7773935999
Status : Marked For Review
Chosen Option : 3

Q.8 Who condemn the report of Simon commission by saying the words "The Simmon Commission Report should be thrown on a heap of rubbish"?

- Ans
- 1. Jawaharlal Nehru
 - 2. Mohammad Ali Jinnah
 - 3. Mahatma Gandhi
 - 4. Shivaswami Iyer

Question ID : 7773936001
Status : Not Answered
Chosen Option : --

Q.9 The river which is known as the India's River of Sorrow:

- Ans
- 1. Krishna
 - 2. Mahanadi
 - 3. Godavari
 - 4. Kosi

Question ID : 7773935995
Status : Not Answered
Chosen Option : --

Q.10 During the reign of Mughal Emperor Jahangir, which Sikh Guru's martyrdom took place?

- Ans
- 1. Guru Gobind Singh
 - 2. Guru Tegh Bahadur Singh
 - 3. Guru Nanak Singh
 - 4. Guru Arjan Dev

Question ID : 7773936003
Status : Marked For Review
Chosen Option : 3

Q.11 Which work is encyclopedic in nature?

- Ans
- 1. Kaumudi Mahotsava
 - 2. Brihat Samhita
 - 3. Astanga Hridaya
 - 4. Uttara Mimamsa

Question ID : 7773936002
Status : Not Answered
Chosen Option : --

Q.12 The Kalinga Prize is awarded by the organization of:

- Ans
- 1. UNESCO
 - 2. FAO
 - 3. UNICEF
 - 4. WTO

Question ID : 7773936011
Status : Not Answered
Chosen Option : --

Q.13 Which organisation discovered natural gas in a block in Gujarat?

- Ans
- 1. BHEL
 - 2. Vedanta
 - 3. NTPC Ltd
 - 4. Oil and Natural Gas Corporation

Question ID : 7773936008
Status : Not Attempted and Marked For Review
Chosen Option : --

Q.14 From which country is Claire Polosak, the first woman umpire to officiate in a men's Test match?

- Ans
- 1. Australia
 - 2. New Zealand
 - 3. United Kingdom
 - 4. South Africa

Question ID : 7773936009
Status : Not Answered
Chosen Option : --

Q.15 The first oil refinery setup in India was _____.

- Ans
- 1. Digboi Refinery
 - 2. Jamnagar Refinery
 - 3. Kochi Refinery
 - 4. Aishwarya Refinery

Question ID : 7773935993
Status : Answered
Chosen Option : 3

Q.16 Which of the following state/UT has planned to set up an Anti-Electrical Killing Cell to protect wild elephants?

- Ans
- 1. Assam
 - 2. Manipur
 - 3. Nagaland
 - 4. West Bengal

Question ID : 7773936007
Status : Answered
Chosen Option : 4

Q.17 The highest civilian award of India, the Bharat Ratna, was instituted on:

- Ans
- 1. 2 January 1954
 - 2. 26 January 1954
 - 3. 20 January 1955
 - 4. 21 January 1964

Question ID : 7773936010
Status : Not Answered
Chosen Option : --

Q.18 Name the Indian state that adopted the Three tier system of Panchayati Raj for the first time:

- Ans
- 1. Arunachal Pradesh
 - 2. Gujarat
 - 3. Andhra Pradesh
 - 4. Rajasthan

Question ID : 7773936000
Status : Not Answered
Chosen Option : --

Q.19 Bishnupur which is famous for terracotta temples is located in which state of India?

- Ans
- 1. Bihar
 - 2. Orissa
 - 3. Chhattisgarh
 - 4. West Bengal

Question ID : 7773935994
Status : Answered
Chosen Option : 3

Q.20 In which state the classical dance form named Sattriya is performed?

- Ans
- 1. West Bengal
 - 2. Nagaland
 - 3. Assam
 - 4. Manipur

Question ID : 7773936006
Status : Not Answered
Chosen Option : --

Q.1 Which of the following is NOT a function in Microsoft Excel?

- Ans
- 1. MAX
 - 2. SUM
 - 3. ALT
 - 4. MIN

Question ID : 7773936025
Status : Answered
Chosen Option : 3

Q.2 I am a type of cell reference that changes when the formula from one cell is copied to another in Microsoft Excel. What am I?

- Ans
- 1. Call by Reference
 - 2. Absolute Reference
 - 3. Reference
 - 4. Relative Reference

Question ID : 7773936022
Status : Answered
Chosen Option : 1

Q.3 _____ is to add an attachment to email.

- Ans
- 1. Paper clip icon
 - 2. Stationery icon
 - 3. Emoji icon
 - 4. Pen icon

Question ID : 7773936019
Status : Answered
Chosen Option : 1

Q.4 In digital signatures, _____ key is known to everyone.

- Ans
- 1. Integrity
 - 2. Foreign
 - 3. Public
 - 4. Private

Question ID : 7773936031
Status : Answered
Chosen Option : 2

Q.5 A cell with a highlighted cell boundary is called as a/an _____ in Microsoft Excel.

- Ans
- 1. right cell
 - 2. center cell
 - 3. left cell
 - 4. active cell

Question ID : 7773936013
Status : Answered
Chosen Option : 4

Q.6 Which of the following is similar to Microsoft Word?

- Ans
- 1. Google Slides
 - 2. Google Drive
 - 3. Google Docs
 - 4. Google Sheets

Question ID : 7773936032
Status : Answered
Chosen Option : 3

Q.7 Which key combination is used to select a row in a worksheet?

- Ans
- 1. Shift + Spacebar
 - 2. Ctrl + Spacebar
 - 3. Alt + Spacebar
 - 4. Caps Lock + Spacebar

Question ID : 7773936023
Status : Answered
Chosen Option : 3

Q.8 A/an _____ is used to verify the authenticity of an electronic document.

- Ans
- 1. internet
 - 2. encryption
 - 3. digital signature
 - 4. firewall

Question ID : 7773936029
Status : Answered
Chosen Option : 3

Q.9 In Google Docs, to add text boxes or shapes to your document, in the Insert menu, click _____ option.

- Ans
- 1. Chart
 - 2. Table
 - 3. Drawing
 - 4. Image

Question ID : 7773936037
Status : Answered
Chosen Option : 1

Q.10 _____ in Microsoft Excel always begins with an equal to sign(=).

- Ans
- 1. Numbers
 - 2. Text
 - 3. Tables
 - 4. Formulae

Question ID : 7773936014
Status : Answered
Chosen Option : 4

Q.11 The maximum number of rows and columns that a table in Google Docs can have is _____ cells.

- Ans
- 1. 10 x 20
 - 2. 10 x 30
 - 3. 20 x 20
 - 4. 20 x 30

Question ID : 7773936036
Status : Answered
Chosen Option : 4

Q.12 In _____ emails, the email message is sent as a simple text without formatting options.

- Ans
- 1. normal text
 - 2. enhanced text
 - 3. rich text
 - 4. plain text

Question ID : 7773936020
Status : Answered
Chosen Option : 1

Q.13 In Google Docs, which command would you use to double-space the text in your document?

- Ans
- 1. Bulleted list
 - 2. Line indent
 - 3. Line spacing
 - 4. Justify

Question ID : 7773936035
Status : Answered
Chosen Option : 2

Q.14 Which of the following is NOT a way to authenticate a person or information on a computer?

- Ans
- 1. Internet
 - 2. Public key encryption
 - 3. Password
 - 4. Private key encryption

Question ID : 7773936030
Status : Answered
Chosen Option : 1

Q.15 What is the limit of number of emails that can be sent through a free Gmail account per day using web browser?

- Ans
- 1. 100
 - 2. 2000
 - 3. 500
 - 4. 300

Question ID : 7773936026
Status : Answered
Chosen Option : 3

Q.16 If one is typing an email and then suddenly the web browser closes abruptly, the email automatically gets saved in a folder. In which folder does the email gets saved?

- Ans
- 1. Drafts
 - 2. Starred
 - 3. Spam
 - 4. Inbox

Question ID : 7773936027
Status : Answered
Chosen Option : 1

Q.17 In Microsoft Excel, press _____ key to enter a new line within a cell.

- Ans
- 1. Alt + Shift
 - 2. Alt + Enter
 - 3. Ctrl + Shift
 - 4. Ctrl + Enter

Question ID : 7773936021
Status : Answered
Chosen Option : 2

Q.18 The _____ option in an email is used to create a new message.

- Ans
- 1. Compose
 - 2. Forward
 - 3. Reply All
 - 4. Delete

Question ID : 7773936024
Status : Answered
Chosen Option : 1

Q.19 Which of the following protocol pushes email messages to the server?

- Ans
- 1. HTTP
 - 2. POP
 - 3. Both POP and HTTP
 - 4. SMTP

Question ID : 7773936018
Status : Answered
Chosen Option : 1

Q.20 What does the following button signify in Microsoft Word?



- Ans
- 1. Justify
 - 2. Align text right
 - 3. Align text left
 - 4. Align center

Question ID : 7773936016
Status : Answered
Chosen Option : 2

Q.21 In Google Docs, a _____ is a pre-designed file you can use to create new documents.

- Ans
- 1. File
 - 2. Image
 - 3. Table
 - 4. Template

Question ID : 7773936033
Status : Answered
Chosen Option : 4

Q.22 SMTP is an email-related protocol. What is the full form of SMTP?

- Ans
- 1. Synchronous Mail Transition Protocol
 - 2. Synchronous Mail Transfer Protocol
 - 3. Simple Mail Transition Protocol
 - 4. Simple Mail Transfer Protocol

Question ID : 7773936017
Status : Answered
Chosen Option : 2

Q.23 Inserting a header at the top of a page in Google Docs will make it appear on _____.

- Ans
- 1. every page
 - 2. any one page
 - 3. the first page only
 - 4. the last page only

Question ID : 7773936034
Status : Answered
Chosen Option : 1

Q.24 Which of the following can be used to provide security while conducting e-commerce?

- Ans
- 1. Digital signatures
 - 2. Email
 - 3. File
 - 4. Internet

Question ID : 7773936028
Status : Answered
Chosen Option : 1

Q.25 To rename a worksheet, you will need to double-click on _____ tab.

- Ans
- 1. Review
 - 2. Sheet
 - 3. Data
 - 4. Insert

Question ID : 7773936015
Status : Answered
Chosen Option : 2

Q.1 Which of the following is a function of the Designated Officer?

- Ans 1. Receiving reports and samples from the Food Safety Officer in his area of jurisdiction
 2. Conducting an inspection of an industrial facility that manufactures or processes food
 3. Analysing the food samples in the laboratory
 4. Ordering the offender to compensate the representative in case of customer injury or death

Question ID : 7773936059
Status : Answered
Chosen Option : 1

Q.2 The FSSAI is organized into _____ divisions.

- Ans 1. 11
 2. 15
 3. 17
 4. 13

Question ID : 7773936039
Status : Answered
Chosen Option : 2

Q.3 What is the full form of TOCP?

- Ans 1. Tetra-Ortho-Cresyl-Phosphate
 2. Tri-Ortho-Carbon-Phosphate
 3. Tetra-Ortho-Carbon-Phosphate
 4. Tri-Ortho-Cresyl-Phosphate

Question ID : 7773936051
Status : Answered
Chosen Option : 3

Q.4 A Clean Street Food Hub should contain:

- Ans 1. 80 or more vendors
 2. 90 or more vendors
 3. 50 or more vendors
 4. 100 or more vendors

Question ID : 7773936053
Status : Answered
Chosen Option : 3

Q.5 The total duration of the Application Phase of Induction Training is _____ working days.

- Ans 1. 20
 2. 25
 3. 21
 4. 23

Question ID : 7773936056
Status : Answered
Chosen Option : 3

Q.6 The vending carts' working surfaces should be at least _____ cm above the ground.

- Ans
- 1. 85-95
 - 2. 60-70
 - 3. 80-100
 - 4. 70-80

Question ID : 7773936054
Status : Answered
Chosen Option : 2

Q.7 Iron deficiency leads to:

- Ans
- 1. mental retardation
 - 2. reduced physical capacity
 - 3. growth retardation
 - 4. compromised immune response

Question ID : 7773936050
Status : Answered
Chosen Option : 4

Q.8 Gluten intolerance is also known as:

- Ans
- 1. Irritable Bowel Syndrome
 - 2. Lactose intolerance
 - 3. Celiac disease
 - 4. Ulcerative colitis

Question ID : 7773936052
Status : Not Attempted and
Marked For Review
Chosen Option : --

Q.9 Recognized Audit Agencies should have valid accreditation against _____.

- Ans
- 1. ISO/IEC17020 and ISO/IEC18021
 - 2. ISO/IEC18020 and ISO/IEC18021
 - 3. ISO/IEC17020 and ISO/IEC17021
 - 4. ISO/IEC18020 and ISO/IEC17021

Question ID : 7773936048
Status : Not Answered
Chosen Option : --

Q.10 FSSAI's mobile units for food testing called 'Food Safety on Wheels' contain facilities for detecting adulteration and rapid testing tools for food items that are commonly consumed, such as:

- Ans
- 1. packaged drinking water
 - 2. spices
 - 3. vegetables
 - 4. coffee

Question ID : 7773936062
Status : Answered
Chosen Option : 1

Q.11 What is the frequency of audits for confectionery with a 51-80% audit score?

- Ans
- 1. Once in 8 months
 - 2. Once in 4 months
 - 3. Once in 12 months
 - 4. Once in 6 months

Question ID : 7773936047
Status : Answered
Chosen Option : 4

Q.12 Who is a part of Food Safety Enforcement Machinery in States?

- Ans
- 1. Central Ministers
 - 2. Independent Scientists
 - 3. Stakeholders
 - 4. Food Safety Officers

Question ID : 7773936058
Status : Not Answered
Chosen Option : --

Q.13 Currently, FSSAI utilizes _____ laboratories for food sample testing.

- Ans
- 1. 162
 - 2. 172
 - 3. 198
 - 4. 183

Question ID : 7773936045
Status : Answered
Chosen Option : 2

Q.14 ISI Mark is used in products like:

- Ans
- 1. Vegetable Oil
 - 2. Honey
 - 3. Pulses
 - 4. Skimmed milk powder

Question ID : 7773936049
Status : Answered
Chosen Option : 4

Q.15 _____ is responsible for maintaining the standards set by Food Safety and Standards Authority of India (FSSAI).

- Ans
- 1. Central Advisory Committee and Panels
 - 2. Scientific Committees and Panels
 - 3. Scientific Committees and Food Safety Commissioners
 - 4. Central Advisory Committee and Scientific Committees

Question ID : 7773936061
Status : Answered
Chosen Option : 4

Q.16 A one-day workshop is organized for _____ to learn about the importance of food safety, the Food Safety and Standard Act, and other key administrative roles in enforcing the Act.

- Ans
- 1. Food Safety Officer
 - 2. Adjudicating Officer
 - 3. Joint Food Safety Commissioner
 - 4. Designated Officer

Question ID : 7773936057
Status : Answered
Chosen Option : 2

Q.17 The Scientific Panel does not offer expert opinion on:

- Ans
- 1. Contaminants
 - 2. Recommended Dietary Allowances
 - 3. Biological hazards
 - 4. Nutraceuticals

Question ID : 7773936040
Status : Answered
Chosen Option : 2

Q.18 _____ of the Food Safety and Standard Regulations, 2011, specifies the standards for various infant products.

- Ans
- 1. 2.4
 - 2. 2.3
 - 3. 2.2.9
 - 4. 2.1.9

Question ID : 7773936041
Status : Not Answered
Chosen Option : --

Q.19 Regulations on Food Safety and Standards (Labeling) establish labelling requirements of packaged foods, which does not include the following:

- Ans
- 1. labelling for GM foods
 - 2. labelling of heavy metals
 - 3. nutritional labelling
 - 4. Percent contribution to RDA

Question ID : 7773936044
Status : Answered
Chosen Option : 2

Q.20 Asafoetida is adulterated with EXCEPT:

- Ans
- 1. maize cob
 - 2. clay
 - 3. chalk powder
 - 4. starch

Question ID : 7773936055
Status : Answered
Chosen Option : 2

Q.21 What is the full form of FFRC?

- Ans
- 1. Food Fortification Research Centre
 - 2. Food Fortification Resource Centre
 - 3. Fermented Food Resource Centre
 - 4. Fermented Food Research Centre

Question ID : 7773936042
Status : Answered
Chosen Option : 1

Q.22 _____ is in charge of the food safety machinery of the various states of India.

- Ans
- 1. Adjudicating Officer
 - 2. State Minister of Health and Family Welfare
 - 3. Food Safety Officer
 - 4. Commissioner of Food Safety of State

Question ID : 7773936060
Status : Answered
Chosen Option : 3

Q.23 _____ refers to the examination of papers submitted by the food importer to the Authorized Officer prior to the arrival of the food articles.

- Ans
- 1. Customs Report
 - 2. Non-conformance Report
 - 3. Pre-arrival document scrutiny
 - 4. Transit document scrutiny

Question ID : 7773936046
Status : Answered
Chosen Option : 3

Q.24 For the purposes of the FSS Act, 2006, the _____ was finally recognized as an Administrative Ministry.

- Ans
- 1. Ministry of Food Processing Industries
 - 2. Ministry of Commerce and Industry
 - 3. Ministry of Health and Family Welfare
 - 4. Ministry of Consumer Affairs, Food and Public Distribution

Question ID : 7773936038
Status : Answered
Chosen Option : 4

Q.25 The regulations governing the Food Safety Officer's functions are referenced under _____ of the Food Safety and Standards Regulations, 2011.

- Ans
- 1. Subsection (6) of Section 47
 - 2. Subsection (4) of Section 15
 - 3. Subsection (4) of Section 28
 - 4. Subsection (5) of Section 29

Question ID : 7773936043
Status : Answered
Chosen Option : 2