

NTA UGC NET December 2025 31st Dec to 7th Jan 2026

Application No	
Candidate Name	
Roll No.	
Test Date	07/01/2026
Test Time	9:00 AM - 12:00 PM
Subject	17 Management

Section : General Paper



Comprehension:

The following table shows the percentage of marks obtained by 7 students in different subjects. Study the table data and answer the question 1 to 5 based on this data. (Here M.M = maximum marks in a subject)

Percentage of marks obtained by students						
Subject →	English	Economics	Sociology	Philosophy	Psychology	IT
↓ Student	(M.M=150)	(M.M=130)	(M.M=120)	(M.M=100)	(M.M=60)	(M.M=40)

Adda247

Test Prime

ALL EXAMS, ONE SUBSCRIPTION



1,00,000+
Mock Tests



**Personalised
Report Card**



**Unlimited
Re-Attempt**



600+
Exam Covered



25,000+ Previous
Year Papers



500%
Refund



ATTEMPT FREE MOCK NOW

A	80	50	80	60	70	80
B	90	80	70	40	80	70
C	80	60	70	70	80	70
D	70	65	80	80	60	60
E	70	65	80	75	50	80
F	60	75	60	80	40	60
G	60	35	50	70	70	70

SubQuestion No : 1

- Q.1 How many students have got more or equal to 70% marks in atleast 4 subjects ?
- (1) 3
(2) 6
(3) 4
(4) 5

Options 1. 1

2. 2
3. 3
4. 4

Question Type : MCQ
Question ID : 4324495546
Option 1 ID : 43244921601
Option 2 ID : 43244921602
Option 3 ID : 43244921603
Option 4 ID : 43244921604
Status : Answered
Chosen Option : 3

Comprehension:

The following table shows the percentage of marks obtained by 7 students in different subjects. Study the table data and answer the question 1 to 5 based on this data. (Here M.M = maximum marks in a subject)

Percentage of marks obtained by students						
Subject → ↓ Student	English (M.M=150)	Economics (M.M=130)	Sociology (M.M=120)	Philosophy (M.M=100)	Psychology (M.M=60)	IT (M.M=40)
A	80	50	80	60	70	80
B	90	80	70	40	80	70
C	80	60	70	70	80	70
D	70	65	80	80	60	60
E	70	65	80	75	50	80
F	60	75	60	80	40	60
G	60	35	50	70	70	70

SubQuestion No : 2

Q.2

Find the aggregate marks obtained by the students C and F respectively.

- (1) 390, 428
- (2) 449, 390
- (3) 428, 387.5
- (4) 420, 385

- Options
- 1. 1
 - 2. 2
 - 3. 3
 - 4. 4

Question Type : MCQ
Question ID : 4324495547
Option 1 ID : 43244921605
Option 2 ID : 43244921606
Option 3 ID : 43244921607
Option 4 ID : 43244921608
Status : Answered
Chosen Option : 3

Comprehension:

The following table shows the percentage of marks obtained by 7 students in different subjects. Study the table data and answer the question 1 to 5 based on this data. (Here M.M = maximum marks in a subject)

Percentage of marks obtained by students						
Subject → ↓ Student	English (M.M=150)	Economics (M.M=130)	Sociology (M.M=120)	Philosophy (M.M=100)	Psychology (M.M=60)	IT (M.M=40)
A	80	50	80	60	70	80
B	90	80	70	40	80	70
C	80	60	70	70	80	70
D	70	65	80	80	60	60
E	70	65	80	75	50	80
F	60	75	60	80	40	60
G	60	35	50	70	70	70

SubQuestion No : 3

Q.3

Find the overall percentage in the subjects of English, Philosophy and IT respectively.

- (1) 71.5, 66.5 and 69.5
- (2) 70.2, 66.2 and 68.2
- (3) 72.2, 65.5 and 70
- (4) 72.85, 67.85 and 70

- Options
- 1. 1

- 2. 2
- 3. 3
- 4. 4

Question Type : MCQ
Question ID : 4324495550
Option 1 ID : 43244921617
Option 2 ID : 43244921618
Option 3 ID : 43244921619
Option 4 ID : 43244921620
Status : Answered
Chosen Option : 4

Comprehension:

The following table shows the percentage of marks obtained by 7 students in different subjects. Study the table data and answer the question 1 to 5 based on this data. (Here M.M = maximum marks in a subject)

Percentage of marks obtained by students						
Subject → ↓ Student	English (M.M=150)	Economics (M.M=130)	Sociology (M.M=120)	Philosophy (M.M=100)	Psychology (M.M=60)	IT (M.M=40)
A	80	50	80	60	70	80
B	90	80	70	40	80	70
C	80	60	70	70	80	70
D	70	65	80	80	60	60
E	70	65	80	75	50	80
F	60	75	60	80	40	60
G	60	35	50	70	70	70

SubQuestion No : 4

- Q.4 Find the average marks in Sociology and IT respectively obtained by all the students (A to G).
- (1) 84, 28
 - (2) 82, 30
 - (3) 80, 28
 - (4) 83, 30

- Options
- 1. 1
 - 2. 2
 - 3. 3
 - 4. 4

Question Type : MCQ
Question ID : 4324495549
Option 1 ID : 43244921613
Option 2 ID : 43244921614
Option 3 ID : 43244921615
Option 4 ID : 43244921616

Option 4 ID : 43244921616
Status : Answered
Chosen Option : 1

Comprehension:

The following table shows the percentage of marks obtained by 7 students in different subjects. Study the table data and answer the question 1 to 5 based on this data. (Here M.M = maximum marks in a subject)

Percentage of marks obtained by students						
Subject → ↓ Student	English (M.M=150)	Economics (M.M=130)	Sociology (M.M=120)	Philosophy (M.M=100)	Psychology (M.M=60)	IT (M.M=40)
A	80	50	80	60	70	80
B	90	80	70	40	80	70
C	80	60	70	70	80	70
D	70	65	80	80	60	60
E	70	65	80	75	50	80
F	60	75	60	80	40	60
G	60	35	50	70	70	70

SubQuestion No : 5

- Q.5 Find the overall percentage of A and G.
- (1) 65.5 and 58.5
 - (2) 69.16 and 55.91
 - (3) 68.5 and 54.5
 - (4) 69.76 and 55.79

- Options
- 1. 1
 - 2. 2
 - 3. 3
 - 4. 4

Question Type : MCQ
Question ID : 4324495548
Option 1 ID : 43244921609
Option 2 ID : 43244921610
Option 3 ID : 43244921611
Option 4 ID : 43244921612
Status : Answered
Chosen Option : 2

Q.6

Arrange the following in chronological order as per year of their enactment.

- A. Working Journalists (Fixation of Rates of Wages) Act
- B. First Press Regulation Act
- C. Contempt of Courts Act
- D. The Indecent Representation of Women (Prohibition) Act

Choose the **correct** answer from the options given below :

- (1) A, B, C, D
- (2) B, A, C, D
- (3) D, C, B, A
- (4) A, C, D, B

- Options
- 1. 1
 - 2. 2
 - 3. 3
 - 4. 4

Question Type : MCQ
Question ID : 4324495563
Option 1 ID : 43244921669
Option 2 ID : 43244921670
Option 3 ID : 43244921671
Option 4 ID : 43244921672
Status : Answered
Chosen Option : 2

Q.7

Match List - I with List - II.

List - I

List - II


(Digital Initiative)	(Description)
A. SAKSHAT	I. Single point of access to all Government services
B. IRINS	II. Reduce dependency on proprietary software in Educational Institutions
C. UMANG	III. A 'One Stop Education' Portal
D. FOSSEE	IV. Web-based Research Information Management

Choose the **correct** answer from the options given below :

- (1) A-III, B-IV, C-I, D-II
- (2) A-IV, B-III, C-II, D-I
- (3) A-II, B-I, C-IV, D-III
- (4) A-I, B-II, C-III, D-IV

- Options
- 1. 1
 - 2. 2
 - 3. 3
 - 4. 4

Question Type : **MCQ**
Question ID : **4324495580**
Option 1 ID : **43244921737**
Option 2 ID : **43244921738**
Option 3 ID : **43244921739**
Option 4 ID : **43244921740**
Status : **Answered**
Chosen Option : **1**



Q.8

Which of the following characteristics of Mass Communication are true ?
A. It needs a mass medium
B. It is impersonal communication
C. It has gatekeepers
D. The feedback is ultrafast
E. It is very cheap/no cost involved
Choose the **correct** answer from the options given below :
(1) A, D and E only

- (2) D and E only
- (3) A, B and C only
- (4) C, D and E only

Options 1. 1
2. 2
3. 3
4. 4

Question Type : MCQ
Question ID : 4324495564
Option 1 ID : 43244921673
Option 2 ID : 43244921674
Option 3 ID : 43244921675
Option 4 ID : 43244921676
Status : Answered
Chosen Option : 3



Q.9

Match List - I with List - II.

List - I (Purpose)	List - II (Act)
A. To form firm beliefs in students	I. Instruction
B. To shape their behavior and conduct	II. Indoctrination
C. To improve learning skills	III. Training
D. To command with knowledge	IV. Conditioning

Choose the correct answer from the options given below :

- (1) A-II, B-I, C-IV, D-III
- (2) A-I, B-II, C-III, D-IV
- (3) A-II, B-III, C-IV, D-I
- (4) A-IV, B-III, C-II, D-I

Options 1. 1

- 2. 2
- 3. 3
- 4. 4

Question Type : MCQ
Question ID : 4324495555
Option 1 ID : 43244921637
Option 2 ID : 43244921638
Option 3 ID : 43244921639
Option 4 ID : 43244921640
Status : Answered
Chosen Option : 4

Q.10 As a Junior Research Fellow (JRF), you plagiarized someone’s work and you are caught, what is the likely consequence ?

A. You will be rewarded for that over time.

B. The research article is retracted with public documentation explaining the reason.

C. The institute funding your research takes disciplinary action.

D. Your academic standing and reputation come into question.

Choose the **correct** answer from the options given below :

(1) C and D only

(2) B and D only

(3) B, C and D only

(4) A, B and C only

- Options**
- 1. 1
 - 2. 2
 - 3. 3
 - 4. 4

Question Type : MCQ
Question ID : 4324495559
Option 1 ID : 43244921653
Option 2 ID : 43244921654
Option 3 ID : 43244921655
Option 4 ID : 43244921656
Status : Answered
Chosen Option : 3

Q.11

Which of the following statement are logically equivalent ?

- A. No cars are non-vehicles
- B. Some cars are vehicles
- C. All vehicles are cars
- D. All cars are vehicles

Choose the **correct** answer from the options given below :

- (1) B and C only
- (2) B and D only
- (3) A and D only
- (4) A, C and D only

Options 1. 1

2. 2

3. 3

4. 4

Question Type : **MCQ**

Question ID : **4324495574**

Option 1 ID : **43244921713**

Option 2 ID : **43244921714**

Option 3 ID : **43244921715**

Option 4 ID : **43244921716**

Status : **Answered**

Chosen Option : **4**

Q.12 Four different populations consist of numbers as given in A-D below : Compute the variance of each different population and arrange in descending order.

- A. 6, 15, 27, 33, 39
- B. 1, 2, 3, 4, 5, 6, 7
- C. 10, 16, 10, 16, 10, 10, 16, 16
- D. 10, 15, 10, 15

Choose the **correct** answer from the options given below :

- (1) D, B, A, C
- (2) A, C, D, B
- (3) B, D, C, A
- (4) C, A, B, D

Options 1. 1

2. 2

3. 3

4. 4

Question Type : **MCQ**

Question ID : **4324495558**

Option 1 ID : **43244921649**

Option 2 ID : **43244921650**

Option 3 ID : **43244921651**

Option 4 ID : **43244921652**

Status : **Answered**

Chosen Option : **2**

Q.13

Match List - I with List - II.

List - I (Communication Elements)	List - II (Explanation)
A. Who	I. The Message
B. Says what	II. The Communicator
C. In which channel	III. The Audience
D. To whom	IV. The Media

Choose the **correct** answer from the options given below :

- (1) A-I, B-II, C-III, D-IV
- (2) A-IV, B-III, C-II, D-I
- (3) A-II, B-I, C-IV, D-III
- (4) A-III, B-II, C-I, D-IV

- Options
- 1. 1
 - 2. 2
 - 3. 3
 - 4. 4

Question Type : **MCQ**
Question ID : **4324495565**
Option 1 ID : **43244921677**
Option 2 ID : **43244921678**
Option 3 ID : **43244921679**
Option 4 ID : **43244921680**
Status : **Answered**
Chosen Option : **3**

Q.14

Arrange the following in the increasing order of their percentage.

- A. 425 out of 500
- B. 384 out of 540

C. 570 out of 700

D. 480 out of 660

Choose the **correct** answer from the options given below :

(1) B, D, C, A

(2) A, B, C, D

(3) D, C, B, A

(4) B, D, A, C

Options 1. 1

2. 2

3. 3

4. 4

Question Type : **MCQ**

Question ID : **4324495570**

Option 1 ID : **43244921697**

Option 2 ID : **43244921698**

Option 3 ID : **43244921699**

Option 4 ID : **43244921700**

Status : **Answered**

Chosen Option : **4**



Q.15

Given below are two statements : one is labelled as **Assertion (A)** and the other is labelled as **Reason (R)**.

Assertion (A) : As per classical Indian school of logic the argument 'the sky-Lotus is fragrant, because it is a Lotus, like the Lotus of a Lake' is fallacious.

Reason (R) : In the above argument the middle term is non exclusive.

In the light of the above statements, choose the **most appropriate answer** from the options given below :

(1) Both **(A)** and **(R)** are correct and **(R)** is the correct explanation of **(A)**

(2) Both **(A)** and **(R)** are correct but **(R)** is **not** the correct explanation of **(A)**

(3) **(A)** is correct but **(R)** is not correct

(4) **(A)** is not correct but **(R)** is correct

Options 1. 1

2. 2

3. 3

4. 4

3. 3
4. 4

Question Type : MCQ
Question ID : 4324495572
Option 1 ID : 43244921705
Option 2 ID : 43244921706
Option 3 ID : 43244921707
Option 4 ID : 43244921708
Status : Answered
Chosen Option : 1

Q.16 If in a certain code language :
“Very bright boys” is coded as : 654
“Most boys are allrounder” is coded as : 1432
“Bright boys are smart” is coded as : 5437
then how “smart” and “bright” shall be coded in that language, respectively ?
(1) 6, 7
(2) 7, 5
(3) 7, 4
(4) 5, 4

Options 1. 1
2. 2
3. 3
4. 4

Question Type : MCQ
Question ID : 4324495567
Option 1 ID : 43244921685
Option 2 ID : 43244921686
Option 3 ID : 43244921687

Option 4 ID : 43244921688
Status : Answered
Chosen Option : 2

Q.17 The average age of a class of 34 students and a teacher reduces by 0.5 years, if the teacher is excluded. The initial average of the class including teacher is 16 years. Find the age of the teacher.

- (1) 30 years
- (2) 33 years
- (3) 35 years
- (4) 37 years

Options 1. 1

2. 2

3. 3

4. 4

Question Type : MCQ
Question ID : 4324495569
Option 1 ID : 43244921693
Option 2 ID : 43244921694
Option 3 ID : 43244921695
Option 4 ID : 43244921696
Status : Answered
Chosen Option : 4

Q.18 Arrange the following terms in order of increasing extension.

- A. Lotus
- B. Plant
- C. Organism
- D. Flower

Choose the **correct** answer from the options given below :

- (1) C, B, A, D
- (2) C, B, D, A
- (3) A, D, B, C
- (4) D, A, B, C

Options 1. 1

2. 2

3. 3

4. 4

Question Type : MCQ
Question ID : 4324495573
Option 1 ID : 43244921709
Option 2 ID : 43244921710
Option 3 ID : 43244921711
Option 4 ID : 43244921712
Status : Answered
Chosen Option : 2

Q.19 Which of the following propositions are so related that they cannot both be true although they may both be false ?

- A. All cars are vehicles.
- B. Some cars are vehicles.
- C. No cars are vehicles.
- D. Some cars are not vehicles.

Choose the **correct** answer from the options given below :

- (1) A and D only
- (2) A and C only
- (3) C and D only
- (4) B and C only

- Options**
- 1. 1
 - 2. 2
 - 3. 3
 - 4. 4

Question Type : **MCQ**

Question ID : **4324495575**

Option 1 ID : **43244921717**

Option 2 ID : **43244921718**

Option 3 ID : **43244921719**

Option 4 ID : **43244921720**

Status : **Answered**

Chosen Option : **2**

Q.20 Given below are two statements : one is labelled as **Assertion (A)** and the other is labelled as **Reason (R)**.

Assertion (A) : Mass communication is the process of delivering information, ideas and attitudes to a sizable and diversified audience.

Reason (R) : It uses media developed for that purpose.

In the light of the above statements, choose the **most appropriate answer** from the options given below :

- (1) Both **(A)** and **(R)** are correct and **(R)** is the correct explanation of **(A)**
- (2) Both **(A)** and **(R)** are correct but **(R)** is **not** the correct explanation of **(A)**
- (3) **(A)** is correct but **(R)** is not correct
- (4) **(A)** is not correct but **(R)** is correct

Options 1. 1

2. 2

3. 3

4. 4

Question Type : **MCQ**

Question ID : **4324495562**

Option 1 ID : **43244921665**

Option 2 ID : **43244921666**

Option 3 ID : **43244921667**

Option 4 ID : **43244921668**

Status : **Answered**

Chosen Option : **1**

Q.21 Given below are two statements : one is labelled as **Assertion (A)** and the other is labelled as **Reason (R)**.

Assertion (A) : The UGC made a course on 'research and publication ethics' compulsory for all students pursuing PhD as they all are potential College and University teachers.

Reason (R) : A teacher must have appropriate understanding of research ethics to teach how to produce knowledge ethically.

In the light of the above statements, choose the **most appropriate answer** from the options given below :

- (1) Both (A) and (R) are correct and (R) is the correct explanation of (A)
- (2) Both (A) and (R) are correct but (R) is **not** the correct explanation of (A)
- (3) (A) is correct but (R) is not correct
- (4) (A) is not correct but (R) is correct

Options

1. 1
2. 2
3. 3
4. 4

Question Type : **MCQ**

Question ID : **4324495552**

Option 1 ID : **43244921625**

Option 2 ID : **43244921626**

Option 3 ID : **43244921627**

Option 4 ID : **43244921628**

Status : **Answered**

Chosen Option : **1**

Q.22 Select appropriate maxims of Teaching :

- A. Simple to complex
- B. Rural to Urban
- C. Concrete to Abstract
- D. Analysis to Synthesis

E. Low IQ to High IQ

Choose the **correct** answer from the options given below :

- (1) B and E only
- (2) A, B and C only
- (3) D and E only
- (4) A, C and D only

Options 1. 1

2. 2

3. 3

4. 4

Question Type : **MCQ**

Question ID : **4324495553**

Option 1 ID : **43244921629**

Option 2 ID : **43244921630**

Option 3 ID : **43244921631**

Option 4 ID : **43244921632**

Status : **Answered**

Chosen Option : **4**



Q.23

Which of the following is a flexibility mechanism under Kyoto protocol ?

- A. Joint Implementation (JI)
- B. Intended Nationally Determined Contributions (INDC)
- C. Common Minimum Programme (CMP)
- D. International Emission Trading (IET)
- E. Clean Development Mechanism (CDM)

Choose the **correct** answer from the options given below :

- (1) A, B and E only
- (2) A, C and E only
- (3) A, C and D only
- (4) A, D and E only

Options 1. 1

- 2. 2
- 3. 3
- 4. 4

Question Type : MCQ
Question ID : 4324495583
Option 1 ID : 43244921749
Option 2 ID : 43244921750
Option 3 ID : 43244921751
Option 4 ID : 43244921752
Status : Answered
Chosen Option : 4



Q.24 Which of the following research design entails studying two contrasting cases using more or less identical methods ?

- (1) Comparative design
- (2) Experimental design
- (3) Longitudinal design
- (4) Latitudinal design

- Options
- 1. 1
 - 2. 2
 - 3. 3
 - 4. 4

Question Type : MCQ
Question ID : 4324495557
Option 1 ID : 43244921645
Option 2 ID : 43244921646
Option 3 ID : 43244921647
Option 4 ID : 43244921648
Status : Answered
Chosen Option : 1

Q.25 Find the missing term in the series.

− 1, 2, 7, ?, 23, 34

- (1) 16

- (2) 15
- (3) 14
- (4) 18

- Options
- 1. 1
 - 2. 2
 - 3. 3
 - 4. 4

Question Type : MCQ
Question ID : 4324495566
Option 1 ID : 43244921681
Option 2 ID : 43244921682
Option 3 ID : 43244921683
Option 4 ID : 43244921684
Status : Answered
Chosen Option : 3

Q.26 Match List - I with List - II.

- | List - I
(Pronouncements) | List - II
(Act/Commission) |
|--|-------------------------------|
| A. Allocation of one lakh rupees per year for education | I. Wood’s Despatch |
| B. English as a medium and as a language is necessary for India’s growth | II. Kothari Commission Report |
| C. Grant-in-Aid for every educational institution | III. Charter Act of 1813 |
| D. India’s destiny is getting shaped in her classrooms | IV. Macaulay Minutes |
- Choose the **correct** answer from the options given below :
- (1) A-III, B-II, C-I, D-IV
 - (2) A-IV, B-I, C-II, D-III
 - (3) A-III, B-IV, C-I, D-II
 - (4) A-IV, B-II, C-III, D-I

- Options
- 1. 1
 - 2. 2
 - 3. 3
 - 4. 4

Question Type : MCQ
Question ID : 4324495590
Option 1 ID : 43244921777
Option 2 ID : 43244921778
Option 3 ID : 43244921779
Option 4 ID : 43244921780
Status : Answered
Chosen Option : 3

Q.27

Select the CORRECT statements :

- A. Chanakya composed Arthashastra at the Vallabhi University.
- B. Panini who wrote Ashtadhyayi was an alumni of Takshashila.
- C. Acharya Shilbhadra was the highest living authority in Odantpuri.
- D. Agraharas was an educational institution with a whole settlement of Brahmanas.
- E. Jain educational institutions are also known as Basadis.

Choose the **correct** answer from the options given below :

- (1) B, C, D and E only
- (2) A, C, D and E only
- (3) A and C only
- (4) B, D and E only

Options 1. 1

2. 2

3. 3

4. 4

Question Type : MCQ

Question ID : 4324495589

Option 1 ID : 43244921773

Option 2 ID : 43244921774

Option 3 ID : 43244921775

Option 4 ID : 43244921776

Status : Answered

Chosen Option : 3

Q.28

Which of the following technology was introduced in the development of third generation of computers ?

- (1) Transistors
- (2) Vacuum Tubes
- (3) Integrated Circuits
- (4) MICR

Options 1. 1

2. 2

3. 3

4. 4

Question Type : MCQ

Question ID : 4324495576

Option 1 ID : 43244921721

Option 2 ID : 43244921722

Option 3 ID : 43244921723
Option 4 ID : 43244921724
Status : Answered
Chosen Option : 3

Q.29 Given below are two statements : one is labelled as **Assertion (A)** and the other is labelled as **Reason (R)**.
Assertion (A) : India is one of the fastest growing economy of the World.
Reason (R) : To grow fast, India has been spending six percent of GDP on education since 2014.
In the light of the above statements, choose the **most appropriate answer** from the options given below :
(1) Both (A) and (R) are correct and (R) is the correct explanation of (A)
(2) Both (A) and (R) are correct but (R) is **not** the correct explanation of (A)
(3) (A) is correct but (R) is not correct
(4) (A) is not correct but (R) is correct

- Options
- 1. 1
 - 2. 2
 - 3. 3
 - 4. 4

Question Type : MCQ
Question ID : 4324495587
Option 1 ID : 43244921765
Option 2 ID : 43244921766
Option 3 ID : 43244921767
Option 4 ID : 43244921768
Status : Answered
Chosen Option : 3

Q.30 Arrange the following chronologically.

- A. NCERT
- B. NAAC
- C. NIRF
- D. AICTE
- E. UGC

Choose the **correct** answer from the options given below :

- (1) B, C, D, E, A
- (2) B, A, E, C, D
- (3) D, E, A, B, C
- (4) E, A, D, B, C

Options

- 1. 1
- 2. 2
- 3. 3
- 4. 4

Question Type : **MCQ**

Question ID : **4324495588**

Option 1 ID : **43244921769**

Option 2 ID : **43244921770**

Option 3 ID : **43244921771**

Option 4 ID : **43244921772**

Status : **Answered**

Chosen Option : **4**

Adda247

Q.31

Identify the correct sequence of steps A-D followed by the CPU as it processes each instruction in a program.

- A. Store
- B. Decode
- C. Fetch
- D. Execute

Choose the **correct** answer from the options given below :

- (1) D, C, A, B
- (2) C, B, D, A
- (3) B, C, D, A
- (4) A, D, B, C

17 17 17 17 17

- Options
- 1. 1
 - 2. 2
 - 3. 3
 - 4. 4

Question Type : MCQ

Question ID : 4324495578

Option 1 ID : 43244921729

Option 2 ID : 43244921730

Option 3 ID : 43244921731

Option 4 ID : 43244921732

Status : Answered

Chosen Option : 2



Q.32

If 40% of a number x is added to another number y , then y becomes 125% of its previous value. Find which of the following is true regarding the values of x and y ?

(1)

$\frac{x}{y} = \frac{8}{5}$

(2)

$x = y$

(3)

$\frac{x}{y} = \frac{5}{8}$

(4)

$\frac{x}{y} = \frac{3}{4}$

Options

1. 1

2. 2

3. 3

4. 4

Question Type : MCQ

Question ID : 4324495568

Option 1 ID : 43244921689

Option 2 ID : 43244921690

Option 3 ID : 43244921691
Option 4 ID : 43244921692
Status : Answered
Chosen Option : 3

Q.33 If $(L)_M$ represents a number L is base-M number system, then which of the following numbers are equivalent to $(AD)_{16}$?

- A. $(255)_8$
- B. $(10101101)_2$
- C. $(173)_{10}$
- D. $(1141)_5$

Choose the **correct** answer from the options given below :

- (1) A, C and D only
- (2) B and D only
- (3) A and B only
- (4) A, B and C only

- Options**
- 1. 1
 - 2. 2
 - 3. 3
 - 4. 4

Question Type : MCQ
Question ID : 4324495579
Option 1 ID : 43244921733
Option 2 ID : 43244921734
Option 3 ID : 43244921735
Option 4 ID : 43244921736
Status : Answered
Chosen Option : 3

Q.34 'It is based on the assumption that mass media have subtle effects on audiences who unknowingly, absorb the dominant symbols, images and messages of media'.

The above-mentioned communication theory is known by what name and who developed it ?

- (1) Agenda Setting by Maxwell McCombs and Donald L. Shaw
- (2) The Cultivation Theory by George Gerbner
- (3) Uses and Gratification Theory by Katz
- (4) Soviet Communist Theory by Wilbur Schramm

- Options
- 1. 1
 - 2. 2
 - 3. 3
 - 4. 4

Question Type : MCQ
Question ID : 4324495561
Option 1 ID : 43244921661
Option 2 ID : 43244921662
Option 3 ID : 43244921663
Option 4 ID : 43244921664
Status : Answered
Chosen Option : 3

Q.35 Bhopal disaster (1984) is one of the most tragic industrial accident, which happened due to release of _____ gas into the atmosphere from Union Carbide factory.

- (1) Methyl isocyanate
- (2) Triethyl chlorine
- (3) Dimethylsulphide
- (4) Hydrogen disulphide

- Options
- 1. 1
 - 2. 2
 - 3. 3
 - 4. 4

Question Type : MCQ
Question ID : 4324495581
Option 1 ID : 43244921741
Option 2 ID : 43244921742
Option 3 ID : 43244921743
Option 4 ID : 43244921744
Status : Answered
Chosen Option : 1

Q.36 Arrange the following environment related acts in the chronological order of their enactment.

- A. The Wildlife Protection Act
- B. Air (Prevention and Control of Pollution) Act
- C. The National Green Tribunal Act
- D. Environment (Protection) Act
- E. The Forest (Conservation) Act

Choose the correct answer from the options given below :

- (1) E, A, D, B, C
- (2) A, E, B, D, C
- (3) A, B, E, C, D
- (4) B, E, A, C, D

- Options
- 1. 1
 - 2. 2
 - 3. 3
 - 4. 4

Question Type : **MCQ**
Question ID : **4324495584**
Option 1 ID : **43244921753**
Option 2 ID : **43244921754**
Option 3 ID : **43244921755**
Option 4 ID : **43244921756**
Status : **Answered**
Chosen Option : **2**

Q.37 The h-index is a metric for the cumulative impact and productivity of a researcher's scholarly output. If Dr Amit has published 10 research papers that have been cited as follows : 9, 7, 3, 11, 4, 8, 2, 12, 6 and 1, then what is the h-index of Dr Amit ?

(1) 5
(2) 6
(3) 7
(4) 4

- Options
- 1. 1
 - 2. 2
 - 3. 3
 - 4. 4

Question Type : **MCQ**
Question ID : **4324495556**
Option 1 ID : **43244921641**
Option 2 ID : **43244921642**
Option 3 ID : **43244921643**
Option 4 ID : **43244921644**
Status : **Answered**
Chosen Option : **2**

Q.38 Match List - I with List - II.

List - I (Measurement Scale)	List - II (Appropriate Example)
A. Ordinal	I. Color of Hair
B. Ratio	II. Satisfaction Level
C. Nominal	III. Difference in temperature in degree Celsius
D. Interval	IV. Salary of employees

Choose the correct answer from the options given below :

- (1) A-II, B-I, C-IV, D-III
- (2) A-I, B-III, C-II, D-IV
- (3) A-IV, B-II, C-III, D-I
- (4) A-II, B-IV, C-I, D-III

- Options
- 1. 1
 - 2. 2
 - 3. 3
 - 4. 4

Question Type : MCQ
Question ID : 4324495560
Option 1 ID : 43244921657
Option 2 ID : 43244921658
Option 3 ID : 43244921659
Option 4 ID : 43244921660
Status : Answered
Chosen Option : 2

Q.39 "Statistically speaking, men who eat more bananas are more likely to be in committed relations. So start eating more bananas". Which of the following fallacies is committed in the above argument ?

- (1) False cause
- (2) Slippery slope

- (3) Red herring
- (4) Appeal to ignorance

- Options
- 1. 1
 - 2. 2
 - 3. 3
 - 4. 4

Question Type : MCQ

Question ID : 4324495571

Option 1 ID : 43244921701

Option 2 ID : 43244921702

Option 3 ID : 43244921703

Option 4 ID : 43244921704

Status : Answered

Chosen Option : 3

Q.40 Ocean acidification occurs due to reaction of atmospheric carbon dioxide with sea water to produce _____.

- (1) Carboxylic acid
- (2) Carbonic acid
- (3) Citric acid
- (4) Nitric acid

- Options
- 1. 1
 - 2. 2
 - 3. 3
 - 4. 4

Question Type : MCQ

Question ID : 4324495582

Option 1 ID : 43244921745

Option 2 ID : 43244921746

Option 3 ID : 43244921747

Option 4 ID : 43244921748

Status : Answered

Chosen Option : 1

Q.41 Match List - I with List - II.

List - I	List - II
(Biosphere Reserve)	(Location)
A. Nanda Devi Biosphere Reserve	I. Odisha
B. Panchmarhi Biosphere Reserve	II. Meghalaya
C. Simlipal Biosphere Reserve	III. Madhya Pradesh
D. Nokrek Biosphere Reserve	IV. Uttarkhand

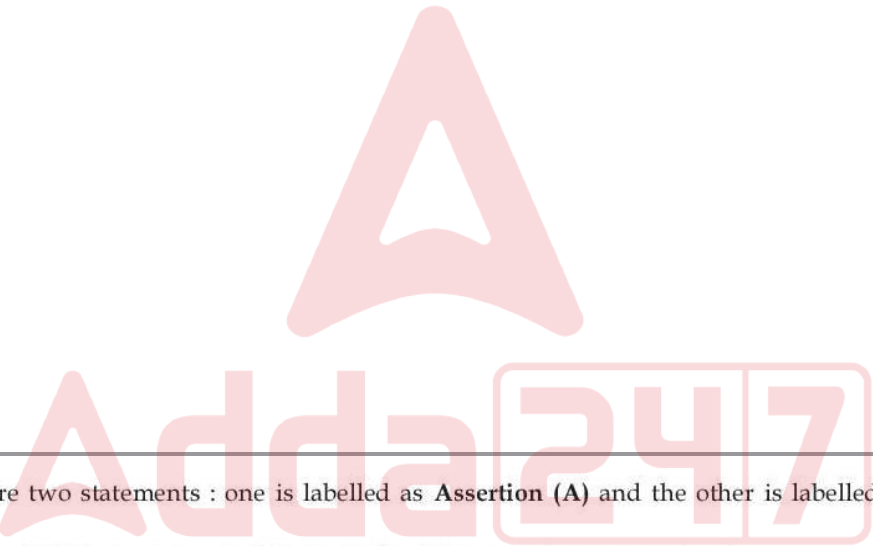
Choose the correct answer from the options given below :

- (1) A-I, B-II, C-IV, D-III

- (2) A-III, B-IV, C-II, D-I
- (3) A-II, B-III, C-I, D-IV
- (4) A-IV, B-III, C-I, D-II

Options 1. 1
2. 2
3. 3
4. 4

Question Type : MCQ
Question ID : 4324495585
Option 1 ID : 43244921757
Option 2 ID : 43244921758
Option 3 ID : 43244921759
Option 4 ID : 43244921760
Status : Answered
Chosen Option : 4



Q.42 Given below are two statements : one is labelled as **Assertion (A)** and the other is labelled as **Reason (R)**.

Assertion (A) : VoIP is an acronym that stands for Voice over Internet Protocol.

Reason (R) : VoIP is a technology that allows you to make voice calls using a broadband Internet connection instead of a regular phone call.

In the light of the above statements, choose the **most appropriate answer** from the options given below :

- (1) Both (A) and (R) are correct and (R) is the correct explanation of (A)
- (2) Both (A) and (R) are correct but (R) is **not** the correct explanation of (A)
- (3) (A) is correct but (R) is not correct
- (4) (A) is not correct but (R) is correct

Options 1. 1
2. 2
3. 3
4. 4

Question Type : MCQ
Question ID : 4324495577
Option 1 ID : 43244921725
Option 2 ID : 43244921726
Option 3 ID : 43244921727
Option 4 ID : 43244921728

Status : Answered
Chosen Option : 1

Q.43 A smart classroom is a :

- (1) Teacher centric classroom
- (2) ICT supported classroom
- (3) Flipped and Blended classroom
- (4) Learner centric classroom

Options 1. 1
2. 2
3. 3
4. 4

Question Type : MCQ
Question ID : 4324495551
Option 1 ID : 43244921621
Option 2 ID : 43244921622
Option 3 ID : 43244921623
Option 4 ID : 43244921624
Status : Answered
Chosen Option : 2

Q.44 Select the correct statements :

- A. Teachers in HEIs must be strict disciplinarian.
- B. Teachers in HEIs must motivate her learners to learn independently.
- C. Teachers in HEIs must not use any technology.
- D. Teachers in HEIs must not interact with students outside classroom.
- E. Teachers in HEIs must be an avid reader and a participant in her discipline's discourse.

Choose the correct answer from the options given below :

- (1) A and C only
- (2) B and E only
- (3) C and D only
- (4) A, B, C, D and E

Options 1. 1
2. 2
3. 3
4. 4

Question Type : MCQ
Question ID : 4324495554
Option 1 ID : 43244921633
Option 2 ID : 43244921634
Option 3 ID : 43244921635
Option 4 ID : 43244921636
Status : Answered
Chosen Option : 2

Q.45 Which of the following University is NOT amongst the first three Universities opened in India in 1857 ?

- (1) University of Delhi
- (2) University of Bombay
- (3) University of Calcutta

- (3) University of Calcutta
- (4) University of Madras

- Options
- 1. 1
 - 2. 2
 - 3. 3
 - 4. 4

Question Type : MCQ
Question ID : 4324495586
Option 1 ID : 43244921761
Option 2 ID : 43244921762
Option 3 ID : 43244921763
Option 4 ID : 43244921764
Status : Answered
Chosen Option : 1

Comprehension:

Read the following passage carefully and answer the questions that follow :

Socialism aims at equality and social justice through government ownership and control over the means of production. Yet, no socialist country has been able to realise these aims. Even in Russia which is the pioneer of Socialism, much injustice, oppression and inequality prevails. There are glaring disparities between the elite and the masses. On the contrary, the Capitalist system is based on private property and voluntary exchange. People have disliked it on the presumption that it serves narrow and vested interests only. However, Capitalist countries have shown better results as people there enjoy comparatively more freedom and prosperity, and less injustice and inequality. It would be incorrect to say that socialism or communism was made corrupt by wicked and incompetent rulers or that capitalism has been successful in spite of the prevalence of immoral values in it. No political system can succeed unless its good and moral qualities are sustained. However idealistic any particular system may be, it can be upheld only by ensuring respect for the dignity and individuality of each person, his rights and values, and by guaranteeing his personal freedom. Compulsion and the use of force, or exertion of psychological pressure should give way to gentle urging, reasoning and convincing. This is the fundamental value in inter-personal human relationships in society.

SubQuestion No : 46

- Q.46 The capitalist countries perform even better as compared to the socialism because it is based on :
- (1) Private property and voluntary exchange
 - (2) Public property and voluntary exchange
 - (3) Private property and involuntary exchange
 - (4) Public property and involuntary exchange

- Options
- 1. 1
 - 2. 2
 - 3. 3
 - 4. 4

Question Type : MCQ
Question ID : 4324495593
Option 1 ID : 43244921785
Option 2 ID : 43244921786
Option 3 ID : 43244921787
Option 4 ID : 43244921788
Status : Answered
Chosen Option : 1

Comprehension:

Read the following passage carefully and answer the questions that follow :

Socialism aims at equality and social justice through government ownership and control over the means of production. Yet, no socialist country has been able to realise these aims. Even in Russia which is the pioneer of Socialism, much injustice, oppression and inequality prevails. There are glaring disparities between the elite and the masses. On the contrary, the Capitalist system is based on private property and voluntary exchange. People have disliked it on the presumption that it serves narrow and vested interests only. However, Capitalist countries have shown better results as people there enjoy comparatively more freedom and prosperity, and less injustice and inequality. It would be incorrect to say that socialism or communism was made corrupt by wicked and incompetent rulers or that capitalism has been successful in spite of the prevalence of immoral values in it. No political system can succeed unless its good and moral qualities are sustained. However idealistic any particular system may be, it can be upheld only by ensuring respect for the dignity and individuality of each person, his rights and values, and by guaranteeing his personal freedom. Compulsion and the use of force, or exertion of psychological pressure should give way to gentle urging, reasoning and convincing. This is the fundamental value in inter-personal human relationships in society.

SubQuestion No : 47

Q.47 The fundamental value in inter-personal human relationships in society is _____.

- (1) collective freedom
- (2) feeling of over dependence on others
- (3) respect for the dignity of each person
- (4) collaboration with external agencies

Options 1. 1

2. 2

3. 3

4. 4

Question Type : **MCQ**

Question ID : **4324495595**

Option 1 ID : **43244921793**

Option 2 ID : **43244921794**

Option 3 ID : **43244921795**

Option 4 ID : **43244921796**

Status : **Answered**

Chosen Option : **3**

Comprehension:

Read the following passage carefully and answer the questions that follow :

Socialism aims at equality and social justice through government ownership and control over the means of production. Yet, no socialist country has been able to realise these aims. Even in Russia which is the pioneer of Socialism, much injustice, oppression and inequality prevails. There are glaring disparities between the elite and the masses. On the contrary, the Capitalist system is based on private property and voluntary exchange. People have disliked it on the presumption that it serves narrow and vested interests only. However, Capitalist countries have shown better results as people there enjoy comparatively more freedom and prosperity, and less injustice and inequality. It would be incorrect to say that socialism or communism was made corrupt by wicked and incompetent rulers or that capitalism has been successful in spite of the prevalence of immoral values in it. No political system can succeed unless its good and moral qualities are sustained. However idealistic any particular system may be, it can be upheld only by ensuring respect for the dignity and individuality of each person, his rights and values, and by guaranteeing his personal freedom. Compulsion and the use of force, or exertion of psychological pressure should give way to gentle urging, reasoning and convincing. This is the fundamental value in inter-personal human relationships in society.

SubQuestion No : 48

Q.48

No socialist country has been able to realise the aims of socialism because :

- (1) It shows narrow and vested interests only.
- (2) People enjoy more freedom and prosperity in capitalism.
- (3) It is made corrupt by incompetent rulers.
- (4) Its good and moral qualities are not sustained.

Options 1. 1

2. 2

3. 3

4. 4

Question Type : MCQ

Question ID : 4324495596

Option 1 ID : 43244921797

Option 2 ID : 43244921798

Option 3 ID : 43244921799

Option 4 ID : 43244921800

Status : Answered

Chosen Option : 4

Comprehension:

Read the following passage carefully and answer the questions that follow :

Socialism aims at equality and social justice through government ownership and control over the means of production. Yet, no socialist country has been able to realise these aims. Even in Russia which is the pioneer of Socialism, much injustice, oppression and inequality prevails. There are glaring disparities between the elite and the masses. On the contrary, the Capitalist system is based on private property and voluntary exchange. People have disliked it on the presumption that it serves narrow and vested interests only. However, Capitalist countries have shown better results as people there enjoy comparatively more freedom and prosperity, and less injustice and

inequality. It would be incorrect to say that socialism or communism was made corrupt by wicked and incompetent rulers or that capitalism has been successful in spite of the prevalence of immoral values in it. No political system can succeed unless its good and moral qualities are sustained. However idealistic any particular system may be, it can be upheld only by ensuring respect for the dignity and individuality of each person, his rights and values, and by guaranteeing his personal freedom. Compulsion and the use of force, or exertion of psychological pressure should give way to gentle urging, reasoning and convincing. This is the fundamental value in inter-personal human relationships in society.

SubQuestion No : 49

Q.49

The advocates of socialism believe that equality can be ensured through :

- (1) the mixed economy
- (2) the government ownership
- (3) equal distribution of the profit to all
- (4) public-private partnership model

Options 1. 1

2. 2

3. 3

4. 4

Question Type : MCQ

Question ID : 4324495592

Option 1 ID : 43244921781

Option 2 ID : 43244921782

Option 3 ID : 43244921783

Option 4 ID : 43244921784

Status : Answered

Chosen Option : 2

Adda247

Comprehension:

Read the following passage carefully and answer the questions that follow :

Socialism aims at equality and social justice through government ownership and control over the means of production. Yet, no socialist country has been able to realise these aims. Even in Russia which is the pioneer of Socialism, much injustice, oppression and inequality prevails. There are glaring disparities between the elite and the masses. On the contrary, the Capitalist system is based on private property and voluntary exchange. People have disliked it on the presumption that it serves narrow and vested interests only. However, Capitalist countries have shown better results as people there enjoy comparatively more freedom and prosperity, and less injustice and inequality. It would be incorrect to say that socialism or communism was made corrupt by wicked and incompetent rulers or that capitalism has been successful in spite of the prevalence of immoral values in it. No political system can succeed unless its good and moral qualities are sustained. However idealistic any particular system may be, it can be upheld only by ensuring respect for the dignity and individuality of each person, his rights and values, and by guaranteeing his personal freedom. Compulsion and the use of force, or exertion of psychological pressure should give way to gentle urging, reasoning and convincing. This is the fundamental value in inter-personal human relationships in society.

SubQuestion No : 50

- Q.50** According to the passage, the key to success in any political system lies with its _____.
- (1) good and moral qualities
 - (2) hard work and perseverance only
 - (3) people who are always concerned about their rights
 - (4) people who use criticality to analyse government sponsored schemes and policies

Options

1. 1
2. 2
3. 3
4. 4

Question Type : **MCQ**
 Question ID : **4324495594**
 Option 1 ID : **43244921789**
 Option 2 ID : **43244921790**
 Option 3 ID : **43244921791**
 Option 4 ID : **43244921792**
 Status : **Answered**
 Chosen Option : **1**

Section : **Management**

- Q.51** Which of the following are the assumptions of Modigliani and Miller's Dividend Irrelevance Theory ?
- A. Perfect Capital Market
 - B. No taxes
 - C. No transaction Cost and no time lag
 - D. Fixed Investment Policy
 - E. Investors behave irrationally

Choose the **correct** answer from the options given below :

- (1) A, B, C, D and E
- (2) C, D and E only
- (3) A, B, C and D only
- (4) A, B and E only

Options

1. 1
2. 2
3. 3
4. 4

Question Type : **MCQ**
 Question ID : **4324495666**
 Option 1 ID : **43244922077**
 Option 2 ID : **43244922078**
 Option 3 ID : **43244922079**
 Option 4 ID : **43244922080**
 Status : **Answered**
 Chosen Option : **3**

Q.52 Which of the following include the target firm's responses to acquisition efforts, that do not affect the wealth of equity holders ?

- (1) Search for white knights
- (2) Golden parachutes
- (3) Shark repellants
- (4) Poison pills

- Options**
- 1. 1
 - 2. 2
 - 3. 3
 - 4. 4

Question Type : **MCQ**
Question ID : **4324495620**
Option 1 ID : **43244921893**
Option 2 ID : **43244921894**
Option 3 ID : **43244921895**
Option 4 ID : **43244921896**
Status : **Answered**
Chosen Option : **3**

Q.53 Which among the following is **not** a hygiene factor ?

- (1) Salary
- (2) Supervision
- (3) Company Policy
- (4) Responsibility

- Options**
- 1. 1
 - 2. 2
 - 3. 3
 - 4. 4

Question Type : **MCQ**
Question ID : **4324495603**
Option 1 ID : **43244921825**
Option 2 ID : **43244921826**
Option 3 ID : **43244921827**
Option 4 ID : **43244921828**
Status : **Answered**
Chosen Option : **4**

Q.54 Match List - I with List - II.

List - I Strategy	List - II Description
A. Protective Put	I. Combining two or more call options (or two or more put options) on the same stock with differing exercise prices or times to maturity.
B. Spread	II. Writing a call position on an asset along with buying the asset.
C. Covered call	III. Buying an asset along with a put on it.
D. Long straddle	IV. Buying a call as well as put on a stock at the same exercise price.

Choose the **correct** answer from the options given below :

- (1) A-II, B-III, C-I, D-IV
- (2) A-III, B-I, C-II, D-IV
- (3) A-III, B-II, C-IV, D-I
- (4) A-I, B-III, C-IV, D-II

- Options
- 1. 1
 - 2. 2
 - 3. 3
 - 4. 4

Question Type : MCQ
Question ID : 4324495679
Option 1 ID : 43244922129
Option 2 ID : 43244922130
Option 3 ID : 43244922131
Option 4 ID : 43244922132
Status : Answered
Chosen Option : 2

Q.55

In case of cost-push inflation :

- (1) Demand curve shifts to the right
- (2) Demand curve shifts to the left
- (3) Supply curve shifts to the left
- (4) Supply curve shifts to the right

Options

1. 1
2. 2
3. 3
4. 4

Question Type : MCQ

Question ID : 4324495597

Option 1 ID : 43244921801

Option 2 ID : 43244921802

Option 3 ID : 43244921803

Option 4 ID : 43244921804

Status : Answered

Chosen Option : 2

Q.56

Match List - I with List - II.

List - I

(Name of Study)

- A. Time and motion study
- B. Hawthorne experiments
- C. Universalist approach
- D. Bureaucracy

List - II

(Name)

- I. Koontz and Donnell
- II. Elton Mayo
- III. F.W. Taylor
- IV. Max Weber

Choose the **correct** answer from the options given below :

- (1) A-II, B-III, C-I, D-IV
- (2) A-III, B-II, C-I, D-IV
- (3) A-I, B-III, C-II, D-IV
- (4) A-IV, B-II, C-I, D-III

- Options
- 1. 1
 - 2. 2
 - 3. 3
 - 4. 4

Question Type : MCQ
Question ID : 4324495672
Option 1 ID : 43244922101
Option 2 ID : 43244922102
Option 3 ID : 43244922103
Option 4 ID : 43244922104
Status : Answered
Chosen Option : 2



Q.57 Which of the following statements is **not** correct ?

- (1) Unsystematic risk can be eliminated through diversification.
- (2) Systematic risk can be eliminated through diversification.
- (3) The Capital Market Line is an efficient set of risk free and risky securities, and it shows the risk return trade-off in the market equilibrium.
- (4) In CAPM model, the market risk of a security is measured in terms of its sensitivity to the market movements which is referred as securities β .

- Options
- 1. 1
 - 2. 2
 - 3. 3
 - 4. 4

4. 4

Question Type : **MCQ**
Question ID : **4324495615**
Option 1 ID : **43244921873**
Option 2 ID : **43244921874**
Option 3 ID : **43244921875**
Option 4 ID : **43244921876**
Status : **Answered**
Chosen Option : **1**

Q.58 The sampling procedure in which committees are formed by choosing people from various departments in an organization to help making decisions on product development, budget allocations and marketing strategies is known as :

- (1) Stratified Sampling
- (2) Multistage Sampling
- (3) Systematic Sampling
- (4) Cluster Sampling

Options 1. 1
2. 2
3. 3
4. 4

Question Type : **MCQ**
Question ID : **4324495628**
Option 1 ID : **43244921925**
Option 2 ID : **43244921926**
Option 3 ID : **43244921927**
Option 4 ID : **43244921928**
Status : **Answered**
Chosen Option : **1**

Q.59 The number of new orders received by the company over last 25 working days are as follows 3, 0, 1, 4, 4, 4, 2, 5, 3, 6, 4, 5, 1, 4, 2, 3, 0, 2, 4, 5, 4, 2, 3, 3, 1. The average orders received during these working days :

- (1) 2 orders
- (2) 3 orders
- (3) 4 orders
- (4) 5 orders

Options 1. 1
2. 2
3. 3
4. 4

Question Type : **MCQ**
Question ID : **4324495625**
Option 1 ID : **43244921913**
Option 2 ID : **43244921914**
Option 3 ID : **43244921915**
Option 4 ID : **43244921916**
Status : **Answered**

Chosen Option : 2

Q.60 Arrange the following steps of implementation of corporate diversification in the logical order :

- Allocate resources and authority to divisions
- Establish coordination & monitor performance
- Design appropriate organizational structure
- Identify core competencies and market opportunities
- Select diversification strategy

Choose the **correct** answer from the options given below :

- A, B, D, C, E
- E, C, B, A, D
- D, E, C, A, B
- C, D, E, B, A

Options

- 1
- 2
- 3
- 4

Question Type : **MCQ**

Question ID : **4324495654**

Option 1 ID : **43244922029**

Option 2 ID : **43244922030**

Option 3 ID : **43244922031**

Option 4 ID : **43244922032**

Status : **Answered**

Chosen Option : **4**

Q.61 Which of the following perceive pluralistic approach to Industrial Relation :

- Work place conflict is seen as a temporary aberration, resulting from poor management, from employees who don't mix with organisation's culture.
- Trade Unions as legitimate representatives of employees interest.
- Stability in industrial relations as the product of concession and compromises between management and union.
- Organisations as coalitions of competing interest, where the management role is to mediate amongst the different interest groups.
- Conflict arises not just because of competing interests within the organisation but because of division within the society between those who own resources and those who have only labour to offer.

Choose the **correct** answer from the options given below :

- A, C and E only
- C, D and E only
- B, C and D only
- A, B and D only

Options

- 1
- 2
- 3
- 4

Question Type : **MCQ**

Question ID : **4324495664**

Option 1 ID : **43244922069**

Option 2 ID : **43244922070**

Option 3 ID : **43244922071**

Option 4 ID : **43244922072**

Status : **Answered**

Chosen Option : 3

Q.62 Given below are two statements : one is labelled as **Assertion (A)** and the other is labelled as **Reason (R)**.

Assertion (A) : Various sub-assemblies in the 2-wheeler plant need to be configured to match the production rate. Similarly, the final assembly stations also need to have the required number of resources at each station to meet the targeted demand.

Reason (R) : In such a scenario, to arrive at a balanced flow of components on the shop floor, the company need to group machines together based on their functionality and jobs will move from one functional department to other.

In the light of the above statements, choose the **most appropriate answer** from the options given below :

- (1) Both (A) and (R) are correct and (R) is the correct explanation of (A)
- (2) Both (A) and (R) are correct but (R) is **not** the correct explanation of (A)
- (3) (A) is correct but (R) is not correct
- (4) (A) is not correct but (R) is correct

Options

1. 1
2. 2
3. 3
4. 4

Question Type : **MCQ**

Question ID : **4324495644**

Option 1 ID : **43244921989**

Option 2 ID : **43244921990**

Option 3 ID : **43244921991**

Option 4 ID : **43244921992**

Status : **Answered**

Chosen Option : **2**

Q.63

Match List - I with List - II.

List - I	List - II
Social Scientists	Framework Theory
A. McGuire	I. Balance Theory of attitude change
B. Rokeach	II. Framework of cultural dimensions
C. Hofstede	III. Framework of values
D. Heider	IV. Matrix of attitudinal change

Choose the **correct** answer from the options given below :

- (1) A-IV, B-III, C-II, D-I
- (2) A-IV, B-II, C-III, D-I
- (3) A-III, B-IV, C-II, D-I
- (4) A-IV, B-I, C-III, D-II

- Options
- 1. 1
 - 2. 2
 - 3. 3
 - 4. 4

Question Type : MCQ

Question ID : 4324495675

Option 1 ID : 43244922113

Option 2 ID : 43244922114

Option 3 ID : 43244922115

Option 4 ID : 43244922116

Status : Answered

Chosen Option : 1

Q.64

Arrange the following steps of Global marketing process in a **correct** order :

- A. Implement the marketing strategy
- B. Decide on market entry strategy
- C. Monitor and control
- D. Identify and evaluate marketing opportunities
- E. Develop a marketing program

Choose the **correct** answer from the options given below :

- (1) A, B, C, D, E
- (2) D, B, E, A, C
- (3) B, E, D, A, C
- (4) E, B, D, A, C

Options

- 1. 1
- 2. 2
- 3. 3
- 4. 4

Question Type : **MCQ**

Question ID : **4324495655**

Option 1 ID : **43244922033**

Option 2 ID : **43244922034**

Option 3 ID : **43244922035**

Option 4 ID : **43244922036**

Status : **Answered**

Chosen Option : **2**

Q.65

Arrange the logical steps under the Net Income (IN) approach of capital structure :

- A. Increase in financial leverage reduces the overall cost of capital.
- B. Reduced overall cost of capital increases the value of the firm.
- C. Assumes cost of equity and cost of debt remain constant.
- D. Concludes that value of firm can be maximized by using as much debt as possible.

D. Concludes that value of firm can be maximized by using as much debt as possible.

Choose the **correct** answer from the options given below :

- (1) C, A, B, D
- (2) A, C, D, B
- (3) B, A, C, D
- (4) C, B, D, A

Options 1. 1

2. 2

3. 3

4. 4

Question Type : **MCQ**

Question ID : **4324495651**

Option 1 ID : **43244922017**

Option 2 ID : **43244922018**

Option 3 ID : **43244922019**

Option 4 ID : **43244922020**

Status : **Answered**

Chosen Option : **1**



Q.66

Given below are two statements : one is labelled as **Assertion (A)** and the other is labelled as **Reason (R)**.

Assertion (A) : In the related diversification, a firm acquires a new business whose value chain possesses competitively valuable cross-business strategic fits.

Reason (R) : Related diversification strategies mainly aimed to realise financial, managerial and/or operational synergies.

In the light of the above statements, choose the **most appropriate answer** from the options given below :

- (1) Both **(A)** and **(R)** are correct and **(R)** is the correct explanation of **(A)**
- (2) Both **(A)** and **(R)** are correct but **(R)** is **not** the correct explanation of **(A)**
- (3) **(A)** is correct but **(R)** is not correct
- (4) **(A)** is not correct but **(R)** is correct

Options 1. 1

2. 2

3.3
4.4

Question Type : MCQ
Question ID : 4324495642
Option 1 ID : 43244921981
Option 2 ID : 43244921982
Option 3 ID : 43244921983
Option 4 ID : 43244921984
Status : Answered
Chosen Option : 3



Q.67

Arrange the following steps in fixed income portfolio process in order :

- A. Drafting guideline for investment policy
- B. Setting up objective
- C. Selection of securities and other assets
- D. Evaluation of performance with benchmark
- E. Selection of portfolio strategy

Choose the correct answer from the options given below :

- (1) B, A, C, E, D
- (2) B, A, E, C, D
- (3) C, D, E, B, A
- (4) A, B, C, E, D

Options 1.1
2.2
3.3
4.4

Question Type : MCQ
Question ID : 4324495642

Question ID : 4324495652
Option 1 ID : 43244922021
Option 2 ID : 43244922022
Option 3 ID : 43244922023
Option 4 ID : 43244922024

Status : Answered
Chosen Option : 2

Q.68

Which of the following best describes the 4 A's from the buyer's viewpoint ?

- A. Adjustability
- B. Awareness
- C. Accessibility
- D. Affordability
- E. Acceptability

Choose the **correct** answer from the options given below :

- (1) A, B, C only
- (2) B, C, D, E only
- (3) B, C, D only
- (4) A, C, D, E only

Options

- 1. 1
- 2. 2
- 3. 3
- 4. 4

Question Type : MCQ
Question ID : 4324495668
Option 1 ID : 43244922085
Option 2 ID : 43244922086
Option 3 ID : 43244922087
Option 4 ID : 43244922088
Status : Answered
Chosen Option : 2

Q.69 Which of the following best describes an American call option ?

- (1) It gives the holder the right to sell the underlying asset at a specified price within a specified period.
- (2) It assists the holder to purchase the underlying asset at the market price on expiry only.
- (3) It gives the holder the right to buy the underlying asset at a specified price within a specified period.
- (4) It is a contract that guarantees a fixed return irrespective of market movements.

Options

- 1. 1
- 2. 2
- 3. 3
- 4. 4

Question Type : **MCQ**

Question ID : **4324495613**

Option 1 ID : **43244921865**

Option 2 ID : **43244921866**

Option 3 ID : **43244921867**

Option 4 ID : **43244921868**

Status : **Answered**

Chosen Option : **3**

Q.70 A transaction that takes place when a large firms that has a small equity stake in a small firm decided to acquire a 100% interest in the firm is called :

- (1) Spin out
- (2) Spin in
- (3) Link Joint Venture
- (4) Scale Joint Venture

Options

- 1. 1
- 2. 2
- 3. 3
- 4. 4

Question Type : **MCQ**

Question ID : **4324495633**

Option 1 ID : **43244921945**

Option 2 ID : **43244921946**

Option 3 ID : **43244921947**

Option 4 ID : **43244921948**

Status : **Answered**

Chosen Option : 3

- Q.71** Based on the Data Mining Process used in Business Analytics arrange the following in sequence :
- A. Pre-Processing the data selecting attributes of interest and checking the outliers
 - B. Assess the degree to which the selected model make company understood variability/ similarity in behaviour and generate segments
 - C. Understanding “What are the common characteristics of the customers, that the company has lost to its competitors”
 - D. Identify the spending behaviour of shoppers understanding the most relevant variables and use of descriptive statistics.
 - E. Modeling technique are selected and applied on dataset.

Choose the **correct** answer from the options given below :

- (1) B, E, C, D, A
- (2) C, E, B, A, D
- (3) D, E, B, A, C
- (4) C, D, A, E, B

- Options**
- 1. 1
 - 2. 2
 - 3. 3
 - 4. 4

Question Type : **MCQ**
Question ID : **4324495659**
Option 1 ID : **43244922049**
Option 2 ID : **43244922050**
Option 3 ID : **43244922051**
Option 4 ID : **43244922052**
Status : **Answered**
Chosen Option : **3**

Q.72 Given below are two statements : one is labelled as **Assertion (A)** and the other is labelled as **Reason (R)**.

Assertion (A) : In monopolistic competition, firms face a downward-sloping demand curve that is more elastic than under monopoly.

Reason (R) : In monopolistic competition, close substitutes of the product are available in the market.

In the light of the above statements, choose the **most appropriate answer** from the options given below :

- (1) Both (A) and (R) are correct and (R) is the correct explanation of (A)
- (2) Both (A) and (R) are correct but (R) is **not** the correct explanation of (A)
- (3) (A) is correct but (R) is not correct
- (4) (A) is not correct but (R) is correct

Options

1. 1
2. 2
3. 3
4. 4

Question Type : **MCQ**

Question ID : **4324495637**

Option 1 ID : **43244921961**

Option 2 ID : **43244921962**

Option 3 ID : **43244921963**

Option 4 ID : **43244921964**

Status : **Answered**

Chosen Option : **1**

Q.73 In Collective Bargaining, an 'impasse' refers to :

- (1) The combined refusal by employees to buy employer's product
- (2) A refusal by the employer to provide opportunities to work
- (3) A situation that occurs when the parties are not able to move further towards settlement, usually because one party is demanding more than the other will offer.
- (4) A situation where employees carry sign announcing their concerns near the employer's place of business.

Options

1. 1
2. 2
3. 3
4. 4

Question Type : **MCQ**

Question ID : **4324495607**

Option 1 ID : **43244921841**

Option 2 ID : **43244921842**

Option 3 ID : **43244921843**

Option 4 ID : **43244921844**

Status : **Answered**

Chosen Option : **3**

Q.74 Put the given steps in sequence to solve the Transportation Model problem in Operations Research :

- A. Test for Optimality
- B. Perform Optimality Test
- C. Make a Transportation Table
- D. Find the basic feasible solution
- E. Iterate towards an optimal solution

Choose the **correct** answer from the options given below :

- (1) A, C, B, D, E

- (2) C, D, B, E, A
- (3) D, E, B, A, C
- (4) E, D, A, B, C

Options 1. 1
2. 2
3. 3
4. 4

Question Type : MCQ
Question ID : 4324495658
Option 1 ID : 43244922045
Option 2 ID : 43244922046
Option 3 ID : 43244922047
Option 4 ID : 43244922048
Status : Answered
Chosen Option : 1

Q.75 Foreign exchange quotation when expressed in a manner that reflects the exchange of a specified number of foreign currencies vis-à-vis one unit of local currency is expressed as :

- (1) Direct Quotation
- (2) European Quotation
- (3) Indirect Quotation
- (4) Geographical Arbitrage

Options 1. 1
2. 2
3. 3
4. 4

Question Type : MCQ
Question ID : 4324495616
Option 1 ID : 43244921877
Option 2 ID : 43244921878
Option 3 ID : 43244921879
Option 4 ID : 43244921880
Status : Answered
Chosen Option : 1

Q.76 Match List - I with List - II.

List - I	List - II
Strategic Business Unit	Features
A. Dogs	I. Used to find other developing businesses
B. Stars	II. Can be converted into stars
C. Cash Cows	III. Need heavy investment, to finance their rapid growth
D. Question Mark	IV. Harvested or divested from portfolio

Choose the correct answer from the options given below :

- (1) A-I, B-II, C-III, D-IV
- (2) A-II, B-I, C-IV, D-III
- (3) A-IV, B-III, C-I, D-II
- (4) A-III, B-II, C-I, D-IV

Options 1. 1
2. 2

2. 2
3. 3
4. 4

Question Type : MCQ
Question ID : 4324495681
Option 1 ID : 43244922137
Option 2 ID : 43244922138
Option 3 ID : 43244922139
Option 4 ID : 43244922140
Status : Answered
Chosen Option : 3



Q.77

Match List - I with List - II.

List - I Category	List - II Strategic Description
A. Defenders	I. Highly competitive and slave of their environment
B. Prospectors	II. Exploit niches in the market place
C. Analyser	III. Cost control as primary focus
D. Reactor	IV. Innovation

Choose the correct answer from the options given below :

- (1) A-III, B-IV, C-II, D-I
- (2) A-II, B-I, C-III, D-IV
- (3) A-II, B-III, C-I, D-IV
- (4) A-I, B-III, C-II, D-IV

Options 1. 1
2. 2
3. 3
4. 4

Question Type : MCQ
Question ID : 4324495676
Option 1 ID : 43244922117
Option 2 ID : 43244922118
Option 3 ID : 43244922119

Option 4 ID : 43244922120
Status : Answered
Chosen Option : 3

Q.78 Which of the following is **not** the type of Data Warehouse ?

- (1) Data Marts (DMs)
- (2) Operational Data Stores (ODS)
- (3) Enterprise Data Warehouses (EDW)
- (4) Data Integration Houses (DIH)

Options 1. 1
2. 2
3. 3
4. 4

Question Type : MCQ
Question ID : 4324495630
Option 1 ID : 43244921933
Option 2 ID : 43244921934
Option 3 ID : 43244921935
Option 4 ID : 43244921936
Status : Answered
Chosen Option : 4

Q.79

Match List - I with List - II.

List - I	List - II
Steps to generate creative ideas	Description
A. Incubation	I. Idea is subject to scrutiny
B. Insight	II. Idea transformed to something of value
C. Evaluation	III. Thinks about a problem
D. Elaboration	IV. Idea is born

Choose the correct answer from the options given below :

- (1) A-III, B-IV, C-I, D-II
- (2) A-III, B-I, C-IV, D-II
- (3) A-IV, B-III, C-I, D-II
- (4) A-IV, B-III, C-II, D-I

- Options
- 1. 1
 - 2. 2
 - 3. 3
 - 4. 4

Question Type : MCQ
Question ID : 4324495686
Option 1 ID : 43244922157
Option 2 ID : 43244922158
Option 3 ID : 43244922159
Option 4 ID : 43244922160
Status : Answered
Chosen Option : 3

- Q.80** Which of the following statements are **correct** for computing the Cost of Equity ?
- If dividend is expected to be constant, then dividend price approach should be used.
 - If earnings per share is expected to be constant, then earnings price approach should be used.
 - If earnings and dividend are expected to grow at a constant rate, then realized yield should be used.
 - If it is difficult to forecast future, then Growth approach (Gordon's model) should be used which looks into the past.
 - When the cost of equity or expectation of the investor is dependent on risk, then Capital Assets Pricing Model (CAPM) should be used.

Choose the **correct** answer from the options given below :

- A, B and C only
- A, B and D only
- B, C and D only
- A, B and E only

Options

- 1
- 2
- 3
- 4

Question Type : **MCQ**

Question ID : **4324495665**

Option 1 ID : **43244922073**

Option 2 ID : **43244922074**

Option 3 ID : **43244922075**

Option 4 ID : **43244922076**

Status : **Answered**

Chosen Option : **4**

- Q.81** HR managers usually employ a systematic process when undertaking Human Resource Planning. Arrange the process in correct sequence :

- A. The Formulation of staffing strategies to meet organisational needs.
- B. Labour supply analysis (including both internal and external sources).
- C. Labour demand forecasting.
- D. Environmental scanning.
- E. Balancing supply and demand consideration

Choose the **correct** answer from the options given below :

- (1) A, C, B, E, D
- (2) D, C, B, E, A
- (3) D, A, C, B, E
- (4) A, D, C, E, B

Options

- 1. 1
- 2. 2
- 3. 3
- 4. 4

Question Type : **MCQ**

Question ID : **4324495649**

Option 1 ID : **43244922009**

Option 2 ID : **43244922010**

Option 3 ID : **43244922011**

Option 4 ID : **43244922012**

Status : **Answered**

Chosen Option : **2**



Q.82

Identify the **correct** sequence of entrepreneurial process :

- A. Establish vision
- B. Identify an opportunity
- C. Gather resources
- D. Persuade others
- E. Create New venture/product/market

Choose the **correct** answer from the options given below :

- (1) B, A, D, C, E
- (2) B, D, A, C, E
- (3) A, B, D, C, E
- (4) B, E, D, C, A

Options 1. 1
2. 2
3. 3
4. 4

Question Type : MCQ
Question ID : 4324495660
Option 1 ID : 43244922053
Option 2 ID : 43244922054
Option 3 ID : 43244922055
Option 4 ID : 43244922056
Status : Answered
Chosen Option : 1



Q.83 Under which of the following conditions, a brand is said to have a negative brand equity ?

- (1) Consumers are unaware of the brand’s existence
- (2) Consumers react less favorably to the brand than to an unbranded version
- (3) The brand is unable to differentiate itself in the market place
- (4) The financial value of the brand decreases below its market price

Options 1. 1
2. 2
3. 3
4. 4

Question Type : MCQ
Question ID : 4324495622
Option 1 ID : 43244921901
Option 2 ID : 43244921902
Option 3 ID : 43244921903
Option 4 ID : 43244921904
Status : Answered
Chosen Option : 4

Q.84

Match List - I with List - II.

List - I	List - II
Industry Structure	Opportunities
A. Declining Industry	I. Product Refinement
B. Emerging Industry	II. First mover advantage
C. Mature Industry	III. Harvest
D. Fragmented Industry	IV. Consolidation

Choose the **correct** answer from the options given below :

- (1) A-II, B-III, C-I, D-IV
- (2) A-III, B-II, C-I, D-IV
- (3) A-I, B-II, C-III, D-IV
- (4) A-IV, B-II, C-I, D-III

- Options
- 1. 1
 - 2. 2
 - 3. 3
 - 4. 4

Question Type : **MCQ**
Question ID : **4324495680**
Option 1 ID : **43244922133**
Option 2 ID : **43244922134**
Option 3 ID : **43244922135**

Option 4 ID : 43244922136
Status : Answered
Chosen Option : 2

Q.85 Given below are two statements : one is labelled as **Assertion (A)** and the other is labelled as **Reason (R)**.

Assertion (A) : For exports of goods, the exporter has to apply to the nominated export inspection agency for conducting the pre-shipment and quality control inspection for the export consignment and obtain Export Credit Certificate conforming to the prescribed specifications.

Reason (R) : This inspection certificate would be required for customs clearance of cargo before shipment.

In the light of the above statements, choose the **most appropriate answer** from the options given below :

- (1) Both (A) and (R) are correct and (R) is the correct explanation of (A)
- (2) Both (A) and (R) are correct but (R) is not the correct explanation of (A)
- (3) (A) is correct but (R) is not correct
- (4) (A) is not correct but (R) is correct

- Options
- 1. 1
 - 2. 2
 - 3. 3
 - 4. 4

Question Type : MCQ
Question ID : 4324495645
Option 1 ID : 43244921993
Option 2 ID : 43244921994
Option 3 ID : 43244921995
Option 4 ID : 43244921996
Status : Answered
Chosen Option : 1

Q.86 Generally, a supermarket is classified by which of the following category ?

- (1) Relative prices
- (2) Ownership
- (3) Product line sold
- (4) Service provided

Options 1. 1

- 2. 2
- 3. 3
- 4. 4

Question Type : **MCQ**

Question ID : **4324495621**

Option 1 ID : **43244921897**

Option 2 ID : **43244921898**

Option 3 ID : **43244921899**

Option 4 ID : **43244921900**

Status : **Answered**

Chosen Option : **3**

Q.87 Fixed manufacturing overhead costs are recognised as :

- (1) Period costs under absorption costing
- (2) Product costs under variable costing
- (3) Part of ending inventory costs under both absorption and variable costing
- (4) Product costs under absorption costing

Options 1. 1

- 2. 2
- 3. 3
- 4. 4

Question Type : **MCQ**

Question ID : **4324495610**

Option 1 ID : **43244921853**

Option 2 ID : **43244921854**

Option 3 ID : **43244921855**

Option 4 ID : **43244921856**

Status : **Answered**

Chosen Option : **1**

Q.88 When the supervisor keeps a log of positive and negative examples of a subordinate's work-related behaviour, it refers to which one of the following methods of performance appraisal ?

- (1) Paired Comparison Method
- (2) Critical Incident Method
- (3) Forced Distributive Incidence Method
- (4) Alternation Ranking Method

Options 1. 1
2. 2
3. 3
4. 4

Question Type : **MCQ**
Question ID : **4324495606**
Option 1 ID : **43244921837**
Option 2 ID : **43244921838**
Option 3 ID : **43244921839**
Option 4 ID : **43244921840**
Status : **Answered**
Chosen Option : **2**

Q.89 If two goods are perfect substitutes for each other, Cross elasticity of demand between them will be :

- (1) Zero
- (2) Positive
- (3) Negative
- (4) Infinity

Options 1. 1
2. 2
3. 3
4. 4

Question Type : **MCQ**
Question ID : **4324495598**
Option 1 ID : **43244921805**
Option 2 ID : **43244921806**
Option 3 ID : **43244921807**
Option 4 ID : **43244921808**
Status : **Answered**
Chosen Option : **4**

Q.90 'Human Capacity' under Building Trade Capacity as per efforts made by WTO to meet special requirements of developing countries refers to help on which of the following :

- (1) Roads and Ports
- (2) National Standards Authorities
- (3) Customs

(4) Trade Lawyers

- Options
- 1. 1
 - 2. 2
 - 3. 3
 - 4. 4

Question Type : MCQ
Question ID : 4324495631
Option 1 ID : 43244921937
Option 2 ID : 43244921938
Option 3 ID : 43244921939
Option 4 ID : 43244921940
Status : Answered
Chosen Option : 4

Q.91 Which one of the following theory of corporate governance focuses on the principal-agent conflict, where managers may prioritize their own interests over those of shareholders, thereby necessitating monitoring, incentives, and control mechanism ?

- (1) Stewardship Theory
- (2) Agency Theory
- (3) Stakeholder Theory
- (4) Resource Dependence Theory

- Options
- 1. 1
 - 2. 2
 - 3. 3
 - 4. 4

Question Type : MCQ
Question ID : 4324495600
Option 1 ID : 43244921813
Option 2 ID : 43244921814
Option 3 ID : 43244921815
Option 4 ID : 43244921816
Status : Answered
Chosen Option : 1

Q.92 Which of the following strategies are commonly used by a firm to win a “Format War” ?

- A. Killer Applications
- B. Cooperate with Competitors
- C. Tapered Integration
- D. Transfer Pricing
- E. Divestment Strategy

Choose the **correct** answer from the options given below :

- (1) A and E only
- (2) B and C only
- (3) C and D only
- (4) A and B only

- Options
- 1. 1

- 2. 2
- 3. 3
- 4. 4

Question Type : **MCQ**
Question ID : **4324495667**
Option 1 ID : **43244922081**
Option 2 ID : **43244922082**
Option 3 ID : **43244922083**
Option 4 ID : **43244922084**
Status : **Answered**
Chosen Option : **3**



Q.93

Entries into the cells of a contingency table should be :

- (1) Frequencies
- (2) Mean Values
- (3) Percentages
- (4) Degrees of Freedom

- Options
- 1. 1
 - 2. 2
 - 3. 3
 - 4. 4

Question Type : **MCQ**
Question ID : **4324495627**
Option 1 ID : **43244921921**
Option 2 ID : **43244921922**
Option 3 ID : **43244921923**
Option 4 ID : **43244921924**
Status : **Answered**
Chosen Option : **4**

Q.94 The difference between the standard quantity of a material specified for actual production and the actual quantity of material used at standard price is known as :

- (1) Material Cost Variance
- (2) Material Usage Variance
- (3) Material Price Variance
- (4) Material Yield Variance

Options

1. 1
2. 2
3. 3
4. 4

Question Type : **MCQ**

Question ID : **4324495611**

Option 1 ID : **43244921857**

Option 2 ID : **43244921858**

Option 3 ID : **43244921859**

Option 4 ID : **43244921860**

Status : **Answered**

Chosen Option : **1**

Q.95

Arrange the basic process of HR strategy in **correct** orders :

- A. Identify people issues
- B. Communicate HR strategy
- C. Identify strategic Business issues
- D. Scan External Environment
- E. Develop HR strategy

Choose the **correct** answer from the options given below :

- (1) E, A, C, D, B
- (2) C, D, E, A, B
- (3) A, C, D, B, E
- (4) D, C, A, E, B

Options

1. 1
2. 2
3. 3
4. 4

Question Type : **MCQ**

Question ID : **4324495650**

Option 1 ID : **43244922013**

Option 2 ID : **43244922014**

Option 3 ID : **43244922015**

Option 4 ID : **43244922016**

Status : **Answered**

Chosen Option : **4**

Q.96 A conscious belief that only the host-country managers can ever really understand the culture and behaviour of the host-country market. It refers to which of the following top executives' values :

- (1) Ethnocentric
- (2) Geocentric
- (3) Polycentric
- (4) Egocentric

Options

- 1. 1
- 2. 2
- 3. 3
- 4. 4

Question Type : **MCQ**

Question ID : **4324495605**

Option 1 ID : **43244921833**

Option 2 ID : **43244921834**

Option 3 ID : **43244921835**

Option 4 ID : **43244921836**

Status : **Answered**

Chosen Option : **3**

Q.97 Given below are two statements : one is labelled as **Assertion (A)** and the other is labelled as **Reason (R)**.

Assertion (A) : Generally, the customers consider the sales force as the representative of the company.

Reason (R) : Often, the company's sale force works directly with the customers.

In the light of the above statements, choose the **most appropriate answer** from the options given below :

- (1) Both **(A)** and **(R)** are correct and **(R)** is the correct explanation of **(A)**
- (2) Both **(A)** and **(R)** are correct but **(R)** is **not** the correct explanation of **(A)**
- (3) **(A)** is correct but **(R)** is not correct
- (4) **(A)** is not correct but **(R)** is correct

Options

- 1. 1
- 2. 2
- 3. 3
- 4. 4

Question Type : **MCQ**

Question ID : **4324495643**

Option 1 ID : **43244921985**

Option 1 ID : 43244921985
Option 2 ID : 43244921986
Option 3 ID : 43244921987
Option 4 ID : 43244921988
Status : Answered
Chosen Option : 1

Q.98

As per Accounting Standard - 22, Deferred Tax Liability arises when :

- (1) Accounting income is less than taxable income
- (2) Accounting income is more than taxable income
- (3) Accounting income is equal to taxable income
- (4) There is an accounting loss but a taxable income

Options

1. 1
2. 2
3. 3
4. 4

Question Type : MCQ
Question ID : 4324495609
Option 1 ID : 43244921849
Option 2 ID : 43244921850
Option 3 ID : 43244921851
Option 4 ID : 43244921852
Status : Answered
Chosen Option : 2

Q.99

Generally, consumers undertake complex buying behaviour in situations characterized by which one of the followings ?

- (1) High involvement in purchase and few perceived difference among brands
- (2) Low involvement in purchase and significant perceived difference among brands
- (3) High involvement in purchase and significance perceived difference among brands
- (4) Low involvement in purchase and few significant perceived difference among brands

Options

1. 1
2. 2
3. 3
4. 4

Question Type : MCQ
Question ID : 4324495624
Option 1 ID : 43244921909
Option 2 ID : 43244921910
Option 3 ID : 43244921911
Option 4 ID : 43244921912
Status : Answered
Chosen Option : 3

Q.100 Low nurturing and low regulating leader behaviour is called :

- (1) Consulting style
- (2) Supporting style
- (3) Delegating style
- (4) Directive style

- Options
- 1. 1
 - 2. 2
 - 3. 3
 - 4. 4

Question Type : MCQ
Question ID : 4324495602
Option 1 ID : 43244921821
Option 2 ID : 43244921822
Option 3 ID : 43244921823
Option 4 ID : 43244921824
Status : Answered
Chosen Option : 3

Q.101 The positive model is applied to planned change through an approach is called appreciative inquiry (AI). Which of the following is **not** the cyclical step of AI ?

- (1) Discovery
- (2) Dreaming
- (3) Design
- (4) Dedication

- Options
- 1. 1
 - 2. 2
 - 3. 3
 - 4. 4

Question Type : MCQ
Question ID : 4324495608
Option 1 ID : 43244921845
Option 2 ID : 43244921846
Option 3 ID : 43244921847
Option 4 ID : 43244921848
Status : Answered
Chosen Option : 2

Q.102 Which of the following techniques of enhancing strategic thinking is most similar to Devil's Advocacy ?

- (1) Brains storming
- (2) Dialectical inquiry
- (3) Nominal group technique
- (4) Delphi method

- Options
- 1. 1
 - 2. 2

2. 2
3. 3
4. 4

Question Type : **MCQ**
Question ID : **4324495618**
Option 1 ID : **43244921885**
Option 2 ID : **43244921886**
Option 3 ID : **43244921887**
Option 4 ID : **43244921888**
Status : **Answered**
Chosen Option : **1**



Q.103

Arrange the following steps in the **correct** order of Controlling Process :

- A. Comparison of actual performance with the standards
- B. Measurement of actual performance
- C. Corrective action wherever required
- D. Establishment of standards

Choose the **correct** answer from the options given below :

- (1) B, A, C, D
- (2) D, B, A, C
- (3) B, C, A, D
- (4) A, C, B, D

Options 1. 1
2. 2

3. 3
4. 4

Question Type : MCQ
Question ID : 4324495647
Option 1 ID : 43244922001
Option 2 ID : 43244922002
Option 3 ID : 43244922003
Option 4 ID : 43244922004
Status : Answered
Chosen Option : 2



Q.104

Match List - I with List - II.

List - I Organizations	List - II Management tools and Techniques
A. World Bank	I. Trade Policy Review Mechanism (TPRM)
B. WTO	II. International Commodity Agreements (ICAs)
C. CFC	III. Global System of Trade Preferences (GSTP)
D. UNCTAD	IV. The Logistics Performance Index (LPI)

Choose the correct answer from the options given below :

- (1) A-II, B-I, C-IV, D-III
- (2) A-III, B-IV, C-I, D-II
- (3) A-IV, B-III, C-II, D-I
- (4) A-IV, B-I, C-II, D-III

Options 1. 1
2. 2
3. 3
4. 4

Question Type : MCQ
Question ID : 4324495684
Option 1 ID : 43244922149
Option 2 ID : 43244922150
Option 3 ID : 43244922151

Option 4 ID : 43244922152
Status : Answered
Chosen Option : 1

Q.105

Given below are two statements : one is labelled as **Assertion (A)** and the other is labelled as **Reason (R)**.

Assertion (A) : It is possible for almost everyone to become a leader if circumstances allow him/her to perform functions dictated by the situation.

Reason (R) : The qualities, characteristics and skill required in a leader are determined to a large extent by the demands of the situation in which he/she is to function as a leader.

In the light of the above statements, choose the **most appropriate answer** from the options given below :

- (1) Both (A) and (R) are correct and (R) is the correct explanation of (A)
- (2) Both (A) and (R) are correct but (R) is not the correct explanation of (A)
- (3) (A) is correct but (R) is not correct
- (4) (A) is not correct but (R) is correct

Options

1. 1
2. 2
3. 3
4. 4

Question Type : MCQ
Question ID : 4324495638
Option 1 ID : 43244921965
Option 2 ID : 43244921966
Option 3 ID : 43244921967
Option 4 ID : 43244921968
Status : Answered
Chosen Option : 1

Q.106 Arrange the following features of adopter groups of new products in the **correct** order of stages of adoption process :

- A. Skeptical
- B. Deliberate
- C. Venturesome
- D. Tradition bound
- E. Opinion leaders

Choose the **correct** answer from the options given below :

- (1) A, C, D, B, E
- (2) B, D, C, E, A
- (3) C, E, B, A, D
- (4) D, C, B, A, E

- Options**
- 1. 1
 - 2. 2
 - 3. 3
 - 4. 4

Question Type : **MCQ**
Question ID : **4324495656**
Option 1 ID : **43244922037**
Option 2 ID : **43244922038**
Option 3 ID : **43244922039**
Option 4 ID : **43244922040**
Status : **Answered**
Chosen Option : **2**

Q.107 String of activities that moves a firm's product from the raw material stage through manufacturing, distribution and ultimately to the end user is called :

- (1) Product Life Cycle
- (2) Value Chain
- (3) New Product Development
- (4) Product - Value Continuum

- Options**
- 1. 1
 - 2. 2
 - 3. 3
 - 4. 4

Question Type : **MCQ**
Question ID : **4324495634**
Option 1 ID : **43244921949**
Option 2 ID : **43244921950**

Option 3 ID : 43244921951
Option 4 ID : 43244921952
Status : Answered
Chosen Option : 2

Q.108 Which of the following is **not** an example of systematic risk ?

- (1) Strike by factory workers
- (2) Interest rate risk
- (3) Purchasing power risk
- (4) Economic recession

Options 1. 1
2. 2
3. 3
4. 4

Question Type : MCQ
Question ID : 4324495612
Option 1 ID : 43244921861
Option 2 ID : 43244921862
Option 3 ID : 43244921863
Option 4 ID : 43244921864
Status : Answered
Chosen Option : 1

Q.109 Match List - I with List - II.

List - I

Leadership Style

- A. Telling
- B. Selling
- C. Participating
- D. Delegating

List - II

Maturity level of Subordinates

- I. Moderate to high
- II. High
- III. Low
- IV. Low to moderate

Choose the **correct** answer from the options given below :

- (1) A-III, B-IV, C-I, D-II
- (2) A-III, B-IV, C-II, D-I
- (3) A-IV, B-III, C-I, D-II
- (4) A-II, B-IV, C-III, D-I

- Options
- 1. 1
 - 2. 2
 - 3. 3
 - 4. 4

Question Type : **MCQ**
Question ID : **4324495674**
Option 1 ID : **43244922109**
Option 2 ID : **43244922110**
Option 3 ID : **43244922111**
Option 4 ID : **43244922112**
Status : **Answered**
Chosen Option : **1**



- Q.110** In the VRIO framework, the V stands for which one of the following questions ?
- (1) Is a resource currently controlled by only a small number of competing firms ?
 - (2) Do firms without a resource face a cost disadvantage in obtaining or developing it ?
 - (3) Are a firm's other policies organised to support the exploitation of its resources ?
 - (4) Does a resource enable a firm to exploit an environmental opportunity and/or neutralize an environment threat ?

- Options
- 1. 1
 - 2. 2
 - 3. 3
 - 4. 4

Question Type : MCQ

Question ID : 4324495619

Option 1 ID : 43244921889

Option 2 ID : 43244921890

Option 3 ID : 43244921891

Option 4 ID : 43244921892

Status : Answered

Chosen Option : 4

Q.111

The kinked demand curve theory of oligopoly suggests that :

- (1) Firms can freely raise prices without losing demand
- (2) Price cuts are matched by rivals, but price increases are not
- (3) Price increases are matched, but price cuts are not
- (4) Demand is perfectly elastic at prevailing price

Options

1. 1
2. 2
3. 3
4. 4

Question Type : MCQ

Question ID : 4324495599

Option 1 ID : 43244921809

Option 2 ID : 43244921810

Option 3 ID : 43244921811

Option 4 ID : 43244921812

Status : Answered

Chosen Option : 3

Q.112

The tendency to draw a negative general impression about an individual based on a single characteristic refers to which of the following ?

- (1) Selective perception
- (2) Halo effect
- (3) Horns effect
- (4) Stereotyping

Options

1. 1
2. 2
3. 3
4. 4

Question Type : MCQ

Question ID : 4324495604

Option 1 ID : 43244921829

Option 2 ID : 43244921830

Option 3 ID : 43244921831

Option 4 ID : 43244921832

Status : Answered

Chosen Option : 3

Q.113 In Production & Operations Management, the abbreviation CNC (its a machine) stands for :

- (1) Computer Number Centered
- (2) Computer Numerically Controlled
- (3) Customer Number Center
- (4) Case Numerically Controlled

- Options**
- 1. 1
 - 2. 2
 - 3. 3
 - 4. 4

Question Type : **MCQ**
Question ID : **4324495626**
Option 1 ID : **43244921917**
Option 2 ID : **43244921918**
Option 3 ID : **43244921919**
Option 4 ID : **43244921920**
Status : **Answered**
Chosen Option : **3**

Q.114 Match List - I with List - II.

List - I	List - II
Purpose of Tool (Quality Related)	Quality Management Tool
A. Identifying Specific Improvement opportunities	I. Control Charts
B. Analysing problems and their root causes	II. Pareto Diagrams
C. Highlighting Problems	III. Pokya Yoke
D. Operational Planning for building quality into products/services	IV. Fish Bone Diagram

Choose the **correct** answer from the options given below :

- (1) A-II, B-III, C-IV, D-I
- (2) A-III, B-II, C-I, D-IV
- (3) A-IV, B-II, C-III, D-I
- (4) A-II, B-IV, C-I, D-III

- Options**
- 1. 1
 - 2. 2
 - 3. 3
 - 4. 4

Question Type : **MCQ**
Question ID : **4324495683**
Option 1 ID : **43244922145**
Option 2 ID : **43244922146**
Option 3 ID : **43244922147**
Option 4 ID : **43244922148**
Status : **Answered**
Chosen Option : **4**

Q.115 Given below are two statements : one is labelled as **Assertion (A)** and the other is labelled as **Reason (R)**.

Assertion (A) : Most fast growth entrepreneurial ventures organise as corporations or limited liability companies rather than as sole proprietorship or partnership.

Reason (R) : Business losses of corporations can be deducted against the shareholder's other sources of income.

In the light of the above statements, choose the **most appropriate answer** from the options given below :

- (1) Both (A) and (R) are correct and (R) is the correct explanation of (A)
- (2) Both (A) and (R) are correct but (R) is **not** the correct explanation of (A)
- (3) (A) is correct but (R) is not correct
- (4) (A) is not correct but (R) is correct

- Options
- 1. 1
 - 2. 2
 - 3. 3
 - 4. 4

Question Type : **MCQ**
Question ID : **4324495646**
Option 1 ID : **43244921997**
Option 2 ID : **43244921998**
Option 3 ID : **43244921999**
Option 4 ID : **43244922000**
Status : **Answered**
Chosen Option : **2**

Q.116

Identify the steps involved in the creative process :

- A. Preparation
- B. Opportunity Recognition
- C. Incubation
- D. Insight
- E. Feasibility analysis

Choose the **correct** answer from the options given below :

- (1) A, B and E only
- (2) A, C and D only
- (3) B, D and E only
- (4) A, E and C only

Options

- 1. 1
- 2. 2
- 3. 3
- 4. 4

Question Type : MCQ

Question ID : 4324495671

Option 1 ID : 43244922097

Option 2 ID : 43244922098

Option 3 ID : 43244922099

Option 4 ID : 43244922100

Status : Answered

Chosen Option : 2

Q.117 Which of the following is **true** :

- (1) The role of Central bank in the foreign exchange market is commercial in nature.
- (2) Forward exchange rate is the rate of that day on which the transaction has taken place
- (3) Cross rate is the rate of exchange of two currencies on the basis of exchange quotes of other pairs of currencies.
- (4) The rate at which a foreign exchange dealer is ready to sell a currency is called bid rate.

Options

1. 1
2. 2
3. 3
4. 4

Question Type : **MCQ**

Question ID : **4324495614**

Option 1 ID : **43244921869**

Option 2 ID : **43244921870**

Option 3 ID : **43244921871**

Option 4 ID : **43244921872**

Status : **Answered**

Chosen Option : **1**

Q.118

Arrange the following step of pricing process in a logical order :

- A. Analyse competitors' price
- B. Estimate demand and revenue

- C. Select pricing method
- D. Assess pricing objectives
- E. Determine Cost

Choose the **correct** answer from the options given below :

- (1) A, C, D, B, E
- (2) D, A, B, C, E
- (3) D, B, E, A, C
- (4) A, D, E, B, C

Options 1. 1

2. 2

3. 3

4. 4

Question Type : **MCQ**

Question ID : **4324495653**

Option 1 ID : **43244922025**


Option 2 ID : **43244922026**

Option 3 ID : **43244922027**

Option 4 ID : **43244922028**

Status : **Answered**

Chosen Option : **2**



Q.119 According to which of the following theories of International Business, the pattern of FDI is determined by combination of Core Competency, locational advantage and entry mode ?

- (1) International Product Life Cycle Theory
- (2) Market Imperfection Theory
- (3) Internalization Theory
- (4) Eclectic Theory

Options 1. 1

2. 2

3. 3

4. 4

Question Type : **MCQ**

Question ID : **4324495629**

Option 1 ID : 43244921929
Option 2 ID : 43244921930
Option 3 ID : 43244921931
Option 4 ID : 43244921932
Status : Answered
Chosen Option : 4

Q.120 Given below are two statements : one is labelled as **Assertion (A)** and the other is labelled as **Reason (R)**.

Assertion (A) : Liberal credit policies increase the probability of defaults and the associated bad debt losses.

Reason (R) : Relaxing credit standards will generally increase sales but may reduce the quality of receivables.

In the light of the above statements, choose the **most appropriate answer** from the options given below :

- (1) Both (A) and (R) are correct and (R) is the correct explanation of (A)
- (2) Both (A) and (R) are correct but (R) is not the correct explanation of (A)
- (3) (A) is correct but (R) is not correct
- (4) (A) is not correct but (R) is correct

- Options
- 1. 1
 - 2. 2
 - 3. 3
 - 4. 4

Question Type : MCQ
Question ID : 4324495641
Option 1 ID : 43244921977
Option 2 ID : 43244921978
Option 3 ID : 43244921979
Option 4 ID : 43244921980
Status : Answered
Chosen Option : 1

Q.121 An entrepreneur whose aim is to maximise the economic returns at a level consistent with the survival of the firm, with or without the element of growth is called :

- (1) Fabian entrepreneur
- (2) First generation entrepreneur
- (3) Modern entrepreneur
- (4) Classical entrepreneur

- Options
- 1. 1
 - 2. 2
 - 3. 3
 - 4. 4

Question Type : MCQ
Question ID : 4324495636
Option 1 ID : 43244921957
Option 2 ID : 43244921958
Option 3 ID : 43244921959
Option 4 ID : 43244921960
Status : Answered
Chosen Option : 4

Q.122

The “Vs” that define the Big Data are :

- A. Volume
- B. Variety
- C. Velocity
- D. Validity
- E. Veracity

Choose the **correct** answer from the options given below :

- (1) A, B and C only
- (2) B, C and E only
- (3) A, B, C and E only
- (4) B, C, D and E only

Options 1. 1

2. 2

3. 3

4. 4

Question Type : **MCQ**

Question ID : **4324495670**

Option 1 ID : **43244922093**

Option 2 ID : **43244922094**

Option 3 ID : **43244922095**

Option 4 ID : **43244922096**

Status : **Answered**

Chosen Option : **3**

Q.123 Which of the following organisational structure is generally adopted by firms to realise the full potential of cost leadership strategies ?

- (1) M - form structure
- (2) U - form structure
- (3) A - form structure
- (4) H - form structure

Options

- 1. 1
- 2. 2
- 3. 3
- 4. 4

Question Type : **MCQ**

Question ID : **4324495617**

Option 1 ID : **43244921881**

Option 2 ID : **43244921882**

Option 3 ID : **43244921883**

Option 4 ID : **43244921884**

Status : **Answered**

Chosen Option : **3**

Q.124

Identify the **correct** sequence of stages in the sales process :

- A. Initial contact
- B. Gather the sales Lead
- C. Meeting objections and concerns
- D. Qualifying the Lead
- E. Sales presentation

Choose the **correct** answer from the options given below :

- (1) B, A, D, E, C
- (2) A, B, C, D, E
- (3) B, D, A, C, E
- (4) A, C, B, D, E

Options

- 1. 1
- 2. 2
- 3. 3
- 4. 4

Question Type : **MCQ**Question ID : **4324495661**Option 1 ID : **43244922057**Option 2 ID : **43244922058**Option 3 ID : **43244922059**Option 4 ID : **43244922060**Status : **Answered**Chosen Option : **1**

- Q.125 Which of the following strategy is generally adopted by a market challenger firm ?
- (1) Follow at a distance
 - (2) Indirect attack
 - (3) Multiple Niching
 - (4) Protect Market Share

- Options
- 1. 1
 - 2. 2
 - 3. 3
 - 4. 4

Question Type : MCQ
Question ID : 4324495623
Option 1 ID : 43244921905
Option 2 ID : 43244921906
Option 3 ID : 43244921907
Option 4 ID : 43244921908
Status : Answered
Chosen Option : 2

- Q.126 The rate at which a company is spending its capital until it reaches profitability is called :
- (1) Burn rate
 - (2) Indifference rate
 - (3) Break even rate
 - (4) Spin off rate

- Options
- 1. 1
 - 2. 2
 - 3. 3
 - 4. 4

Question Type : MCQ
Question ID : 4324495635
Option 1 ID : 43244921953
Option 2 ID : 43244921954
Option 3 ID : 43244921955
Option 4 ID : 43244921956
Status : Answered
Chosen Option : 1

- Q.127 Match List - I with List - II.

List - I	List - II
Concept	Description
A. Marketing Concept	I. Qualitative, performing and innovative products
B. Selling Concept	II. Large-scale sales and promotion effort
C. Production Concept	III. Customer focus and values
D. Product Concept	IV. Available and affordable products

21. Project Concept 22. Transfer and Machine Process

Choose the **correct** answer from the options given below :

- (1) A-I, B-II, C-III, D-IV
- (2) A-II, B-III, C-I, D-IV
- (3) A-IV, B-III, C-II, D-I
- (4) A-III, B-II, C-IV, D-I

- Options
- 1. 1
 - 2. 2
 - 3. 3
 - 4. 4

Question Type : **MCQ**
Question ID : **4324495682**
Option 1 ID : **43244922141**
Option 2 ID : **43244922142**
Option 3 ID : **43244922143**
Option 4 ID : **43244922144**
Status : **Answered**
Chosen Option : **4**



Q.128 Five jobs are to be scheduled in two machines in a manufacturing shop. All the five jobs undergo processing in both machines as per table.

Processing Time			
		Machine 1	Machine 2
A.	Job 1	4	7
B.	Job 2	6	3
C.	Job 3	2	3
D.	Job 4	7	7
E.	Job 5	8	6

- Identify the best sequence using Johnson's rule.
Choose the **correct** answer from the options given below :
- (1) A, B, C, D, E
 - (2) B, E, D, A, C
 - (3) C, A, D, E, B

(4) D, C, B, A, E

- Options
- 1. 1
 - 2. 2
 - 3. 3
 - 4. 4

Question Type : MCQ
Question ID : 4324495657
Option 1 ID : 43244922041
Option 2 ID : 43244922042
Option 3 ID : 43244922043
Option 4 ID : 43244922044
Status : Answered
Chosen Option : 3



Q.129 Match List - I with List - II.

List - I (Term)	List - II (Description)
A. Law of Diminishing Marginal Utility	I. On each successive unit consumed, the utility derived goes on falling
B. Consumer Surplus	II. The rate at which consumer is ready to compromise goods X for another goods Y, holding the level of satisfaction constant
C. Marginal Rate of Substitution	III. Difference between what a consumer is ready to pay for a commodity and what he actually pays for it
D. Budget Line	IV. All those combinations of two goods which consumer can buy spending his given money income and their given prices.

Choose the correct answer from the options given below :

- (1) A-II, B-III, C-I, D-IV
- (2) A-III, B-II, C-I, D-IV
- (3) A-I, B-III, C-II, D-IV
- (4) A-IV, B-II, C-I, D-III

- Options
- 1. 1
 - 2. 2
 - 3. 3
 - 4. 4

Question Type : MCQ
Question ID : 4324495673
Option 1 ID : 43244922105
Option 2 ID : 43244922106
Option 3 ID : 43244922107
Option 4 ID : 43244922108
Status : Answered
Chosen Option : 3

Q.130 Match List - I with List - II.

List - I (Leverage)	List - II (Interpretation)
A. Operating Leverage	I. Sensitivity of EPS to EBIT changes
B. Financial Leverage	II. Sensitivity of EBIT to sales changes
C. Combined Leverage	III. Sensitivity of EPS to Sales changes
D. Degree of Leverage	IV. Ratio-based quantitative measure

Choose the correct answer from the options given below :

- (1) A-II, B-I, C-III, D-IV
- (2) A-I, B-II, C-III, D-IV
- (3) A-I, B-II, C-IV, D-III
- (4) A-III, B-I, C-II, D-IV

- Options
- 1. 1
 - 2. 2
 - 3. 3
 - 4. 4

Question Type : MCQ
Question ID : 4324495678
Option 1 ID : 43244922125
Option 2 ID : 43244922126
Option 3 ID : 43244922127
Option 4 ID : 43244922128
Status : Answered
Chosen Option : 1

- Q.131 Which of the following statements are **correct** ?
- A. Gross Domestic Product at Market Price = Gross National Product at Market Price + Net Factor Income From Abroad
 - B. Gross Domestic Product at factor Cost = Gross Domestic Product at Market Price – Indirect Taxes + Subsidies
 - C. Net Domestic Product at Market Price = Net National Product at Market Price – Net Factor Income From Abroad
 - D. Gross Domestic Product at Market Price = Net Domestic Product at Market Price + Depreciation
 - E. Net National Product at Market Price = Gross Domestic Product at Market Price + Net Factor Income From Abroad + Depreciation
- Choose the **correct** answer from the options given below :
- (1) A, B and C only
 - (2) A, B and D only
 - (3) B, C and D only
 - (4) A, B and E only

- Options
- 1. 1
 - 2. 2
 - 3. 3
 - 4. 4

Question Type : **MCQ**
Question ID : **4324495662**
Option 1 ID : **43244922061**
Option 2 ID : **43244922062**
Option 3 ID : **43244922063**
Option 4 ID : **43244922064**
Status : **Answered**
Chosen Option : **4**

Q.132

Match List - I with List - II.

List - I Concept	List - II Model
A. The concept advocates the view that “where data lives”	I. Saas
B. Infrastructure resources like networks, storage, servers are provided to clients.	II. Daas
C. Allows consumers to use applications and software that run on distant computers in the cloud infrastructure	III. Iaas
D. Companies can deploy their software and applications in the cloud so that their customers can use them.	IV. Pass

Choose the correct answer from the options given below :

- (1) A-II, B-III, C-I, D-IV
- (2) A-III, B-II, C-I, D-IV
- (3) A-II, B-I, C-IV, D-III
- (4) A-IV, B-III, C-II, D-I

- Options
- 1. 1
 - 2. 2
 - 3. 3
 - 4. 4

Question Type : MCQ

Question ID : 4324495685

Option 1 ID : 43244922153

Option 2 ID : 43244922154

Option 3 ID : 43244922155

Option 4 ID : 43244922156

Status : Answered

Chosen Option : 4

Q.133 The process by which people’s emotions are caused by the emotions of others is called ?

(1) Emotion Regulation

- (2) Emotion Contagion
- (3) Emotional Dissonance
- (4) Emotional Labour

- Options
- 1. 1
 - 2. 2
 - 3. 3
 - 4. 4

Question Type : MCQ
Question ID : 4324495601
Option 1 ID : 43244921817
Option 2 ID : 43244921818
Option 3 ID : 43244921819
Option 4 ID : 43244921820
Status : Answered
Chosen Option : 2

Q.134

- Options
- 1. 1
 - 2. 2
 - 3. 3
 - 4. 4

Question Type : MCQ
Question ID : 4324495648
Option 1 ID : 43244922005
Option 2 ID : 43244922006
Option 3 ID : 43244922007
Option 4 ID : 43244922008
Status : Answered
Chosen Option : 1

Q.135

Identify Emotion Regulation techniques from among the following :

- A. Emotional Suppression
- B. Cognitive reappraisal
- C. Social sharing
- D. Emotional Intelligence
- E. Emotional Labour

Choose the correct answer from the options given below :

- (1) A, B and C only
- (2) A, C and D only
- (3) B, C and D only
- (4) A, B and E only

Options 1. 1
2. 2
3. 3
4. 4

Question Type : MCQ
Question ID : 4324495663
Option 1 ID : 43244922065
Option 2 ID : 43244922066
Option 3 ID : 43244922067
Option 4 ID : 43244922068
Status : Answered
Chosen Option : 1

Q.136

Options 1. 1
2. 2
3. 3
4. 4

Question Type : MCQ
Question ID : 4324495669
Option 1 ID : 43244922089
Option 2 ID : 43244922090
Option 3 ID : 43244922091
Option 4 ID : 43244922092
Status : Answered
Chosen Option : 2

Q.137

Options 1. 1
2. 2
3. 3
4. 4

Question Type : MCQ
Question ID : 4324495632
Option 1 ID : 43244921941
Option 2 ID : 43244921942
Option 3 ID : 43244921943
Option 4 ID : 43244921944
Status : Answered
Chosen Option : 1

Q.138

Options 1. 1
2. 2
3. 3

4. 4

Question Type : **MCQ**
Question ID : **4324495640**
Option 1 ID : **43244921973**
Option 2 ID : **43244921974**
Option 3 ID : **43244921975**
Option 4 ID : **43244921976**
Status : **Answered**
Chosen Option : **2**

Q.139

- Options
- 1. 1
 - 2. 2
 - 3. 3
 - 4. 4

Question Type : **MCQ**
Question ID : **4324495677**
Option 1 ID : **43244922121**
Option 2 ID : **43244922122**
Option 3 ID : **43244922123**
Option 4 ID : **43244922124**
Status : **Answered**
Chosen Option : **1**

Q.140

- Options
- 1. 1
 - 2. 2
 - 3. 3
 - 4. 4

Question Type : **MCQ**
Question ID : **4324495639**
Option 1 ID : **43244921969**
Option 2 ID : **43244921970**
Option 3 ID : **43244921971**
Option 4 ID : **43244921972**
Status : **Answered**
Chosen Option : **1**

Comprehension:

SubQuestion No : 141

Q.141

- Options
- 1. 1
 - 2. 2
 - 3. 3
 - 4. 4

Question Type : **MCQ**
Question ID : **4324495689**
Option 1 ID : **43244922165**
Option 2 ID : **43244922166**

Option 3 ID : 43244922167
Option 4 ID : 43244922168
Status : Answered
Chosen Option : 2

Comprehension:

SubQuestion No : 142

Q.142

- Options
- 1. 1
 - 2. 2
 - 3. 3
 - 4. 4

Question Type : MCQ
Question ID : 4324495690
Option 1 ID : 43244922169
Option 2 ID : 43244922170
Option 3 ID : 43244922171
Option 4 ID : 43244922172
Status : Answered
Chosen Option : 3

Comprehension:

SubQuestion No : 143

Q.143

- Options
- 1. 1
 - 2. 2
 - 3. 3
 - 4. 4

Question Type : MCQ
Question ID : 4324495688
Option 1 ID : 43244922161
Option 2 ID : 43244922162
Option 3 ID : 43244922163
Option 4 ID : 43244922164
Status : Answered
Chosen Option : 3

Comprehension:

SubQuestion No : 144

Q.144

- Options
- 1. 1
 - 2. 2
 - 3. 3
 - 4. 4

Question Type : MCQ
Question ID : 4324495691
Option 1 ID : 43244922173
Option 2 ID : 43244922174
Option 3 ID : 43244922175
Option 4 ID : 43244922176
Status : Answered
Chosen Option : 2

Comprehension:

SubQuestion No : 145

Q.145

- Options
- 1. 1
 - 2. 2
 - 3. 3
 - 4. 4

Question Type : MCQ
Question ID : 4324495692
Option 1 ID : 43244922177
Option 2 ID : 43244922178
Option 3 ID : 43244922179
Option 4 ID : 43244922180
Status : Answered
Chosen Option : 1

Comprehension:

SubQuestion No : 146

Q.146

- Options
- 1. 1
 - 2. 2
 - 3. 3
 - 4. 4

Question Type : MCQ
Question ID : 4324495695
Option 1 ID : 43244922185
Option 2 ID : 43244922186
Option 3 ID : 43244922187
Option 4 ID : 43244922188
Status : Answered
Chosen Option : 3

Comprehension:

SubQuestion No : 147

Q.147

- Options
- 1. 1
 - 2. 2
 - 3. 3
 - 4. 4

Question Type : MCQ
Question ID : 4324495694
Option 1 ID : 43244922181
Option 2 ID : 43244922182
Option 3 ID : 43244922183
Option 4 ID : 43244922184
Status : Answered
Chosen Option : 3

Comprehension:

SubQuestion No : 148

Q.148

- Options
- 1. 1
 - 2. 2

- 2. 2
- 3. 3
- 4. 4

Question Type : MCQ

Question ID : 4324495696

Option 1 ID : 43244922189

Option 2 ID : 43244922190

Option 3 ID : 43244922191

Option 4 ID : 43244922192

Status : Answered

Chosen Option : 1

Comprehension:

SubQuestion No : 149

Q.149

- Options
- 1. 1
 - 2. 2
 - 3. 3
 - 4. 4

Question Type : MCQ

Question ID : 4324495697

Option 1 ID : 43244922193

Option 2 ID : 43244922194

Option 3 ID : 43244922195

Option 4 ID : 43244922196

Status : Answered

Chosen Option : 2



Comprehension:

SubQuestion No : 150

Q.150

- Options
- 1. 1
 - 2. 2
 - 3. 3
 - 4. 4

Question Type : MCQ

Question ID : 4324495698

Option 1 ID : 43244922197

Option 2 ID : 43244922198

Option 3 ID : 43244922199

Option 4 ID : 43244922200
Status : Answered
Chosen Option : 3











