

Constable GD in CAPFs and SSF Rifleman GD in AR and Sepoy in NCB Examination 2025

Exam Date	21/02/2025
Exam Time	12:00 PM - 1:00 PM
Subject	Constable GD Examination 2025

Section : Part-A-General Intelligence and Reasoning

Q.1

Read the given statements and conclusions carefully. Assuming that the information given in the statements is true, even if it appears to be at variance with commonly known facts, decide which of the given conclusions logically follow(s) from the statements.

Statements:

All breads are croissants.

All breads are muffins.

All breads are pastries.

Conclusions:

(I): All croissants are pastries.

(II): Some pastries are muffins.

Ans

1. Neither conclusion (I) nor (II) follows.

2. Both conclusions (I) and (II) follow.

3. Only conclusion (I) follows.

4. Only conclusion (II) follows.

Q.2

Select the combination of letters that when sequentially placed in the blanks of the given series, will logically complete the series.

_TWRU_SNQL_JMHK_IDG_

Ans

1. YQOEB

2. ZQNEC

3. ZPNFC

4. YPOFB

Q.3

E, F, G, H, J, K and L are sitting around a circular table facing the centre of the table (but not necessarily in the same order).

Only one person sits between E and L when counted from the left of L. K sits third to the right of J. F sits third to the left of G. K sits to the immediate right of F. H is not an immediate neighbour of F.

How many people sit between H and L when counted from the right of H?

Ans

1. Three

2. Two

3. Four

4. One

Adda247

Test Prime

ALL EXAMS, ONE SUBSCRIPTION



1,00,000+
Mock Tests



**Personalised
Report Card**



**Unlimited
Re-Attempt**



600+
Exam Covered



25,000+ Previous
Year Papers



500%
Refund



ATTEMPT FREE MOCK NOW

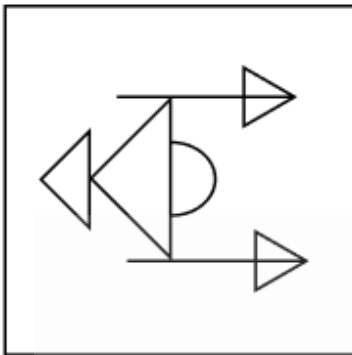
Q.4 Select the option in which the given figure (X) is embedded (rotation is NOT allowed).



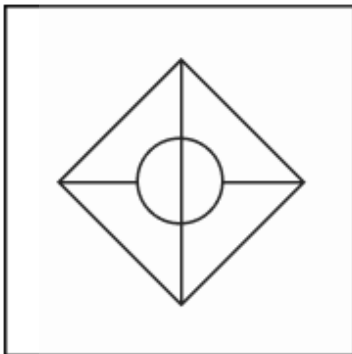
(X)

Ans

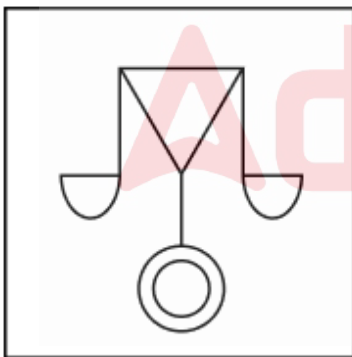
✗ 1.



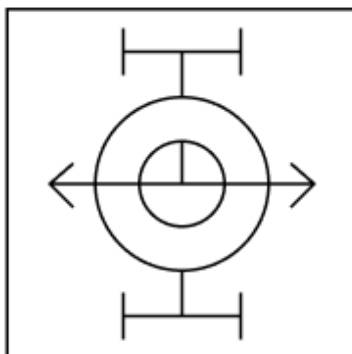
✗ 2.



✗ 3.



✓ 4.



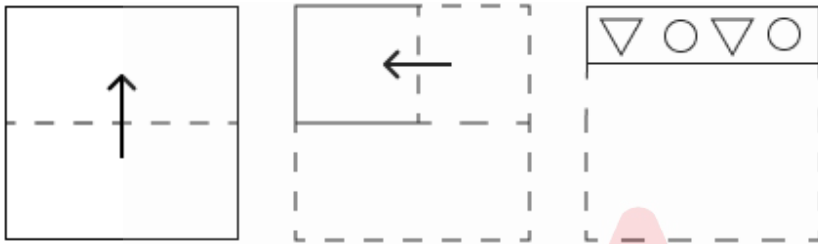
Q.5 In a certain code language, 'SHOE' is coded as '3214' and 'HOST' is coded as '3219'. How is 'T' coded in the given language?

- Ans
- ✓ 1. 9
 - ✗ 2. 2
 - ✗ 3. 3
 - ✗ 4. 1

Q.6 'FNNTA' is related to 'BKRZ' in a certain way based on the English alphabetical order. In the same way, 'JOCY' is related to 'FLAX'. To which of the following is 'RWLS' related, following the same logic?

- Ans
- ✗ 1. OSIR
 - ✓ 2. NTJR
 - ✗ 3. MRGT
 - ✗ 4. MSHS

Q.7 A paper is folded and cut as shown below. How will it appear when unfolded?



Ans

- ✓ 1.
- ✗ 2.
- ✗ 3.
- ✗ 4.

Q.8 Eight people are sitting in two parallel rows containing 4 people each in such a way that there is equal distance between adjacent persons.
In row 1, T, R, A and K are seated and all of them are facing south.
In row 2, S, O, M and E are seated and all of them are facing north.
Thus, each person faces another person from the other row.
T sits third to the right of K. The one facing S is an immediate neighbour of K. The one facing R is an immediate neighbour of S. The one facing T is an immediate neighbour of O. M sits at some place to the left of E. Which of the following represents both people sitting at extreme ends of the rows?

- Ans
- ☒ 1. E and A
 - ☒ 2. M and K
 - ☒ 3. A and M
 - ☒ 4. E and R

Q.9 Based on the English alphabetical order, three of the following four letter-clusters are alike in a certain way and thus form a group. Which letter-cluster DOES NOT belong to that group?
(Note: The odd one out is not based on the number of consonants/vowels or their position in the letter-cluster.)

- Ans
- ☒ 1. KOL
 - ☒ 2. RVS
 - ☒ 3. HLI
 - ☒ 4. LPN

Q.10 What should come in place of the question mark (?) in the given series based on the English alphabetical order?

FTR KYW PDB UIG ?

- Ans
- ☒ 1. ZNM
 - ☒ 2. YNL
 - ☒ 3. ZNL
 - ☒ 4. ZNO

Q.11 In a certain code language,
'A < B' means 'A is the son of B',
'A / B' means 'A is the father of B',
'A : B' means 'A is the wife of B' and
'A ! B' means 'A is the brother of B'.

How is F related to H if 'F ! L : A < S / H'?


- Ans
- ☒ 1. Brother's wife's sister
 - ☒ 2. Brother's wife's brother
 - ☒ 3. Brother's wife's father
 - ☒ 4. Brother's wife's mother


Q.12 Which two numbers should be interchanged to make the given equation correct?
 $(98 - 45 + 14) + (84 \div 7) - 36 + (6 \times 2) = 43$
(Note: Interchange should be done of entire number and not individual digits of a given number)


- Ans
- ☒ 1. 98 and 84
 - ☒ 2. 2 and 7
 - ☒ 3. 7 and 6
 - ☒ 4. 7 and 14


Q.13 What should come in place of the question mark (?) in the given series?

723 722 719 714 707 ?

- Ans
-  1. 696


 2. 694

 3. 700

 4. 698


Q.14 What should come in place of the question mark (?) in the given series?

16 37 79 142 226 ?

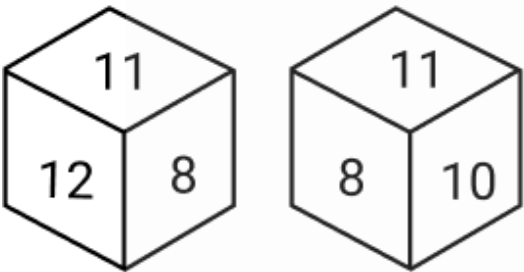
- Ans
-  1. 307


 2. 309


 3. 313


 4. 331


Q.15 Two different positions of the same dice are given below. Which is the number on the face opposite to the face containing 10?




- Ans
-  1. 7


 2. 8


 3. 12


 4. 11

Q.16 The position(s) of how many letters will remain unchanged if each of the letters in the word GROUPIE is arranged in the English alphabetical order?

- Ans
-  1. One

 2. Two

 3. Zero

 4. Three

Q.17 In a certain code language, ‘RICE’ is coded as ‘7613’ and ‘FIRE’ is coded as ‘1374’. How is ‘C’ coded in the given language?

- Ans
-  1. 7

 2. 3

 3. 6

 4. 1

Q.18 Select the figure from among the given options that can replace the question mark (?) in the following series.

Q	m	η	Q	↑	η	m	↑	?
η	↑	↑	m	m	Q	Q	η	

Ans

✓ 1.

Q	m
η	↑

✗ 2.

Q	↑
m	η

✗ 3.

↑	Q
η	m

✗ 4.

η	m
Q	↑

Q.19 FCBF is related to EBAE in a certain way based on the English alphabetical order. In the same way, XUTX is related to WTSW. To which of the given options is NKJN related, following the same logic?

Ans

✓ 1. MJIM

✗ 2. MIHM

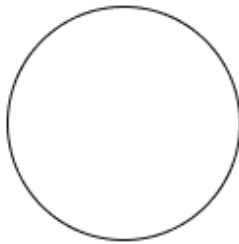
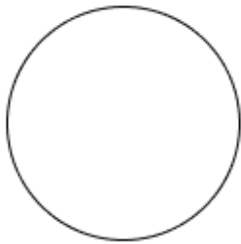

✗ 3. MKHQ

✗ 4. MJHM

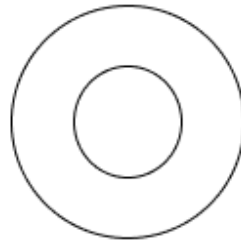
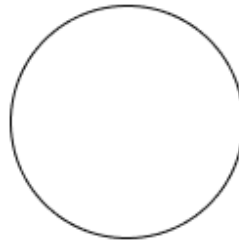
Q.20 Select the Venn diagram that best illustrates the relationship between the following classes.
Rose, Flower, Bear

Ans

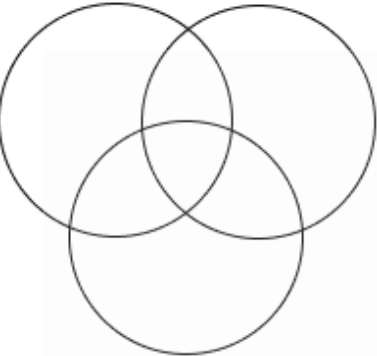
✗ 1.



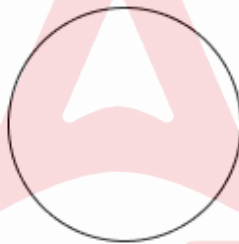
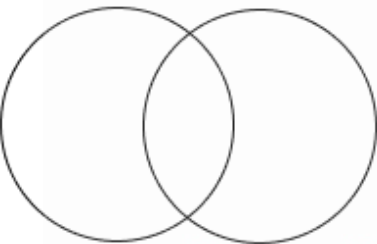
✓ 2.



✗ 3.



✗ 4.



Section : Part-B-General Knowledge and General awareness

Q.1 Shruti Sadolikar is an Indian classical singer of the Khayal genre of which Gharana?

Ans

✗ 1. Patiala Gharana

✗ 2. Rampur-Sahaswan Gharana

✗ 3. Mewati Gharana

✓ 4. Jaipur-Atrauli Gharana

Q.2 Who was the last Mauryan king, killed by his Commander-in-Chief, leading to the establishment of the Shunga dynasty?

Ans

✗ 1. Dashratha

✗ 2. Bindusara

✓ 3. Brihadratha

✗ 4. Samprati

Q.3 Which state topped the medal tally of the Khelo India Youth Games 2024?

Ans

✗ 1. Manipur

✓ 2. Maharashtra

✗ 3. Rajasthan

✗ 4. Madhya Pradesh

Q.4 Yonex-Sunrise All India Sub Junior Ranking Badminton Tournament 2023 was held at _____ in Bihar from 27th June to 2nd July 2023.

- Ans
- ☐ 1. Patna
 - ☐ 2. Bhagalpur
 - ☐ 3. Rajgir
 - ☒ 4. Gaya

Q.5 Fundamental Duties were added under which part of the Constitution of India?

- Ans
- ☒ 1. Part IVA
 - ☐ 2. Part VI
 - ☐ 3. Part VIA
 - ☐ 4. Part IV

Q.6 Which five-year plan focused on food, work and productivity?

- Ans
- ☐ 1. Eighth
 - ☐ 2. Fifth
 - ☒ 3. Seventh
 - ☐ 4. Sixth

Q.7 In which of the following Indian states is the annual Hampi Dance Utsav celebrated?

- Ans
- ☐ 1. Odisha
 - ☐ 2. Tamil Nadu
 - ☒ 3. Karnataka
 - ☐ 4. Jharkhand

Q.8 What is the primary objective of the government's fiscal policy?

- Ans
- ☐ 1. To destabilise the economy
 - ☐ 2. To sell goods to USA
 - ☒ 3. To ensure maximum employment
 - ☐ 4. To push inflation

Q.9 Which of the following water bodies typically has the highest salinity (dissolved salts)?

- Ans
- ☐ 1. Lake
 - ☐ 2. Pond
 - ☐ 3. River
 - ☒ 4. Ocean

Q.10 The Water (Prevention and Control of Pollution) Amendment Act, 2024 establishes pollution control boards to prevent and control water pollution at _____.

- Ans
- ☐ 1. only State level
 - ☒ 2. the central and state level
 - ☐ 3. only Union Territory level
 - ☐ 4. only central level

Q.11 The Supreme Court Judges Removal motion must be signed by _____ members in the Lok Sabha or _____ members in the Rajya Sabha to adopt the motion in the parliament.

- Ans
- ☐ 1. 54; 27
 - ☐ 2. 150; 75
 - ☒ 3. 100; 50
 - ☐ 4. 75; 37

Q.12 In which of the following years was the 'National Institution for Transforming India' established?

- Ans
- ☒ 1. 2016
 - ☒ 2. 2015
 - ☒ 3. 2014
 - ☒ 4. 2017

Q.13 According to Census 2011, which state of the following states has the highest population?

- Ans
- ☒ 1. Bihar
 - ☒ 2. Tamil Nadu
 - ☒ 3. West Bengal
 - ☒ 4. Rajasthan

Q.14 In which functional group is the carbonyl carbon attached to the hydrogen atom as well as to the carbon?

- Ans
- ☒ 1. Aldehyde
 - ☒ 2. Carboxylic acids
 - ☒ 3. Ketone
 - ☒ 4. Amides

Q.15 Mudiyettu which was included in the Representative List of the Intangible Cultural Heritage of Humanity in 2010, is a ritual dance drama of which state?

- Ans
- ☒ 1. Odisha
 - ☒ 2. Tamil Nadu
 - ☒ 3. Kerala
 - ☒ 4. Karnataka

Q.16 Who was the British Governor-General during the Revolt of 1857?

- Ans
- ☒ 1. Lord Ripon
 - ☒ 2. Lord Curzon
 - ☒ 3. Lord Canning
 - ☒ 4. Lord Dalhousie

Q.17 According to the National Multidimensional Poverty Index 2023, which of the following states has the largest percentage of poor people?

- Ans
- ☒ 1. Meghalaya
 - ☒ 2. Jharkhand
 - ☒ 3. Uttar Pradesh
 - ☒ 4. Andhra Pradesh

Q.18 The Bundi Utsav is a popular festival in_____.

- Ans
- ☒ 1. Rajasthan
 - ☒ 2. Punjab
 - ☒ 3. Mizoram
 - ☒ 4. Madhya Pradesh

Q.19 Animals where the fertilisation of eggs and the development of the baby up to the fetal stage takes place inside the mother's body are known as _____.

- Ans
- ☒ 1. oviparous
 - ☒ 2. invertebrates
 - ☒ 3. vertebrates
 - ☒ 4. viviparous

Q.20 Who among the following was a member of the High-Level Committee on Simultaneous Elections?

- Ans
- ✓ 1. Arjun Ram Meghwal
 - ✗ 2. Nitin Gadkari
 - ✗ 3. Jagat Prakash Nadda
 - ✗ 4. Subrahmanyam Jaishankar

Section : Part-C-Elementary Mathematics

Q.1 If the average marks of three sections of Class X, having 35, 40, and 25 students, respectively, are 90, 88, and 80, then the average marks of all the students of Class X, is:

- Ans
- ✗ 1. 76.8
 - ✗ 2. 78.6
 - ✗ 3. 87.6
 - ✓ 4. 86.7

Q.2 Let x be the greatest number which, when divided by 31, 61 and 91, leaves the same remainder. The LCM of x and 48 is:

- Ans
- ✗ 1. 360
 - ✗ 2. 178
 - ✓ 3. 240
 - ✗ 4. 420

Q.3 When x is subtracted from each of 55, 50, 23 and 22, the resulting numbers, in this order, are in proportion. What is the fourth proportion of 3, 7 and x?

- Ans
- ✓ 1. 35
 - ✗ 2. 32
 - ✗ 3. 38
 - ✗ 4. 36

Q.4 A person drives 60 km at a speed of 30 km/hr, then 30 km at 60 km/hr, and finally 45 km at 90 km/hr. What is the average speed (in km/hr) for the entire trip?

- Ans
- ✗ 1. 50
 - ✗ 2. 42.5
 - ✓ 3. 45
 - ✗ 4. 47.5

Q.5 The average weight of Rakesh, Shivam and Rupesh is 46 kg. If the average weight of Rakesh and Shivam be 40 kg and that of Shivam and Rupesh be 48 kg, then the weight of Shivam (in kg) is:

- Ans
- ✓ 1. 38
 - ✗ 2. 53
 - ✗ 3. 48
 - ✗ 4. 58

Q.6 The population of a district is 383000, out of which 221000 are males. 58% of the population is literate. If 58% males are literate, then what percentage of females are literate?

- Ans
- ✗ 1. 57%
 - ✗ 2. 61%
 - ✓ 3. 58%
 - ✗ 4. 56%

Q.7 400 custard apples were bought at ₹1200 per hundred and were sold at a profit of ₹900. Find the selling price (in ₹) per dozen of custard apples.

- Ans

☒ 1. 171

☐ 2. 181

☐ 3. 161

☐ 4. 186

Q.8 Find the value of $\left[(26 \times 14) \times \left\{ 9 \div 3 \times \frac{(19 - 15)}{2} \right\} \right]$

- Ans

☒ 1. 2184

☐ 2. 2165

☐ 3. 2197

☐ 4. 2188

Q.9 The value of $22 - 2 \times [7 + 8 \times \{ 14 - 7 (6 - 5) \times 2 \} \div 37]$ is:

- Ans

☐ 1. 18

☒ 2. 8

☐ 3. 7

☐ 4. 2

Q.10 Evaluate: $16 + 8 \div 4 - 3 \times 3$

- Ans

☐ 1. 8

☐ 2. 11

☐ 3. 12

☒ 4. 9

Q.11 A man sold an article for ₹221, there by gaining 10.5%. The cost of the article (in ₹) was:

- Ans

☐ 1. 247

☐ 2. 244

☒ 3. 200

☐ 4. 198

Q.12 If the height of a cylinder is 16 cm and radius is 14 cm, what is the curved surface area (in cm²) of it?

- Ans

☐ 1. 1424

☐ 2. 1418

☒ 3. 1408

☐ 4. 1412

Q.13 The area of a triangle is constant. Find the percentage increase in its perpendicular height if the base of the triangle is decreased by 20%.

- Ans

☐ 1. 12.5%

☐ 2. 15%

☐ 3. 20%

☒ 4. 25%

Q.14 When difference between compound and simple interest for three years is ₹152 at 4% interest per annum, the principal is ₹_____

- Ans**
- ☐ 1. 32450
 - ☐ 2. 30675
 - ☒ 3. 31250
 - ☐ 4. 31670

Q.15 Find the fourth proportional of 4, 6 and 5.

- Ans**
- ☐ 1. 9.5
 - ☐ 2. 8
 - ☒ 3. 7.5
 - ☐ 4. 6

Q.16 Two trains having lengths of 110 m and 390 m are running at speeds of 120 km/h and 130 km/h, respectively, in the same direction. The time taken (in minutes) by the faster train, coming from behind, to completely cross the other train is:

- Ans**
- ☒ 1. 3
 - ☐ 2. 2
 - ☐ 3. 1.8
 - ☐ 4. 5

Q.17 Parth, Rizwan and Sangeeta can do a piece of work in 40, 60 and 80 days, respectively. In how many days can Parth do the work if he is assisted by Rizwan and Sangeeta on every third day?

- Ans**
- ☐ 1. $28\frac{4}{5}$
 - ☐ 2. $29\frac{4}{5}$
 - ☐ 3. $28\frac{3}{13}$
 - ☒ 4. $29\frac{3}{13}$

Q.18 The marked price of a wrist watch is ₹1,200. It is sold at two successive discounts of 5% and 8%, respectively. Find its selling price.

- Ans**
- ☒ 1. ₹1,048.80
 - ☐ 2. ₹1,052.60
 - ☐ 3. ₹1,070.85
 - ☐ 4. ₹1,085.65

Q.19 Shan has ₹1617 with him. He divided it amongst his sons Piyush and Manoj and asked them to invest it at 10% rate of interest compounded annually. It was seen that Piyush and Manoj got same amount after 11 and 12 years respectively. How much (in ₹) did Shan give to Piyush?

- Ans**
- ☒ 1. 847
 - ☐ 2. 697
 - ☐ 3. 870
 - ☐ 4. 770

Q.20 The simple interest on a principal amount (in ₹) is ₹168 for a period of 8 years at the rate of 4% per annum. The principal amount (in ₹) is:

- Ans**
- ☐ 1. 517
 - ☐ 2. 527
 - ☐ 3. 534
 - ☒ 4. 525

Section : Part-D-English

Q.1 Select the most appropriate option to fill in the blank.

She is very good _____ dancing.

- Ans
- ☒ 1. on
 - ☒ 2. at
 - ☒ 3. of
 - ☒ 4. for

Q.2 Select the most appropriate ANTONYM of the highlighted word in the given sentence.

The librarian encouraged meticulous organisation of the books on the shelves.

- Ans
- ☒ 1. Orderly
 - ☒ 2. Sloppy
 - ☒ 3. Detailed
 - ☒ 4. Categorised

Q.3 Select the most appropriate one-word substitute for the underlined segment in the given sentence.

Ravi was responsible for giving an/a false and defamatory statement about his friend.

- Ans
- ☒ 1. slanderous
 - ☒ 2. adulatory
 - ☒ 3. flattery
 - ☒ 4. adorable

Q.4 The following sentence has been split into segments. Identify the segment that contains a grammatical error. If you don't find any error, mark 'No error' as your answer.
He has won the / elections before but / this time the situation is different.

- Ans
- ☒ 1. elections before but
 - ☒ 2. No error
 - ☒ 3. this time the situation is different.
 - ☒ 4. He has won the

Q.5 Select the most appropriate ANTONYM of the given word.

Fade

- Ans
- ☒ 1. Accept
 - ☒ 2. Admire
 - ☒ 3. Achieve
 - ☒ 4. Appear

Q.6 Select the most appropriate option to fill in the blank.

Arun and his friends are like _____; they always agree on everything.

- Ans
- ☒ 1. two pots in a kitchen
 - ☒ 2. two potatoes in a plate
 - ☒ 3. two pearls in a ring
 - ☒ 4. two peas in a pod

Q.7 Select the appropriate synonym of the given word.

Candid

- Ans
- ✓ 1. Honest
 - ✗ 2. Reserved
 - ✗ 3. Deceptive
 - ✗ 4. Hesitant

Q.8 Select the INCORRECTLY spelt word.

- Ans
- ✗ 1. Mortally
 - ✗ 2. Frankly
 - ✗ 3. Deliberately
 - ✓ 4. Awkwardely

Q.9 The following sentence has been divided into parts. One of them may contain an error. Select the part that contains the error from the given options. If you don't find any error, mark 'No error' as your answer.

It was that cold/ that I could not feel/ my fingers at night.

- Ans
- ✓ 1. It was that cold
 - ✗ 2. that I could not feel
 - ✗ 3. No error.
 - ✗ 4. my fingers at night.

Q.10 Select the most appropriate idiom that can substitute the underlined segment in the given sentence.

She has been feeling unwell lately, so she decided to take a break and rest.

- Ans
- ✓ 1. under the weather
 - ✗ 2. under the sun
 - ✗ 3. under the radar
 - ✗ 4. under pressure

Q.11 Select the most appropriate option to fill in the blank.

The concert tickets were sold out within minutes, leaving many fans _____.

- Ans
- ✗ 1. satisfied
 - ✓ 2. disappointed
 - ✗ 3. screaming
 - ✗ 4. clear

Q.12 Select the option that rectifies the spelling error in the given sentence.

The sun dipped below the horrizon, casting a warm, golden glow across the tranquil lake.

- Ans
- ✗ 1. caesting
 - ✓ 2. horizon
 - ✗ 3. tranquill
 - ✗ 4. accross

Q.13 Select the most appropriate synonym of the given word.

Grumpy

- Ans
- ✓ 1. Irritable
 - ✗ 2. Jubilant
 - ✗ 3. Competent
 - ✗ 4. Fascinating

Q.14 Select the most appropriate ANTONYM of the given word.

Credible

- Ans
- ✗ 1. Credulous
 - ✓ 2. Unreliable
 - ✗ 3. Fantastic
 - ✗ 4. Friendly

Q.15 Select the word that best completes the given sentence. Determine the collocation through the sentence.

Pranav and Karan, the hikers from the south, _____ lost in the dense forest but eventually found their way.

- Ans
- ✗ 1. gone
 - ✗ 2. had
 - ✓ 3. got
 - ✗ 4. held

Comprehension:

In the following passage, some words have been deleted. Read the passage carefully and select the most appropriate option to fill in each blank.
The volume of tea imports into the Colonies rose _____ 1 _____ a very fast rate in the four years _____ 2 _____ up to the Boston Tea Party. They went from 55 tonnes in 1770, which was close to the amount _____ 3 _____ in the harbour, to 370 tonnes the year the tea was dumped. This was an increase of almost seven times. The population of the Colonies was about 2 million people in 1770 and didn't _____ 4 _____ much in that four-year period. Basic economics tells us this _____ 5 _____ increase in supply without more customers meant the price of tea had to fall.

SubQuestion No : 16

Q.16 Select the most appropriate option to fill in blank no. 1.

- Ans
- ✗ 1. about
 - ✗ 2. of
 - ✗ 3. beside
 - ✓ 4. at


Comprehension:

In the following passage, some words have been deleted. Read the passage carefully and select the most appropriate option to fill in each blank.
 The volume of tea imports into the Colonies rose _____1_____ a very fast rate in the four years _____2_____ up to the Boston Tea Party. They went from 55 tonnes in 1770, which was close to the amount _____3_____ in the harbour, to 370 tonnes the year the tea was dumped. This was an increase of almost seven times. The population of the Colonies was about 2 million people in 1770 and didn't _____4_____ much in that four-year period. Basic economics tells us this _____5_____ increase in supply without more customers meant the price of tea had to fall.


SubQuestion No : 17

Q.17 Select the most appropriate option to fill in blank no. 2.


- Ans

 1.


following

 2.

lagging

 3.

leading

 4.

trailing

Comprehension:

In the following passage, some words have been deleted. Read the passage carefully and select the most appropriate option to fill in each blank.
 The volume of tea imports into the Colonies rose _____1_____ a very fast rate in the four years _____2_____ up to the Boston Tea Party. They went from 55 tonnes in 1770, which was close to the amount _____3_____ in the harbour, to 370 tonnes the year the tea was dumped. This was an increase of almost seven times. The population of the Colonies was about 2 million people in 1770 and didn't _____4_____ much in that four-year period. Basic economics tells us this _____5_____ increase in supply without more customers meant the price of tea had to fall.

SubQuestion No : 18

Q.18 Select the most appropriate option to fill in blank no. 3.

- Ans

 1.

elevated

 2.

fostered

 3.

upheld

 4. dumped

Comprehension:

In the following passage, some words have been deleted. Read the passage carefully and select the most appropriate option to fill in each blank.
 The volume of tea imports into the Colonies rose _____1_____ a very fast rate in the four years _____2_____ up to the Boston Tea Party. They went from 55 tonnes in 1770, which was close to the amount _____3_____ in the harbour, to 370 tonnes the year the tea was dumped. This was an increase of almost seven times. The population of the Colonies was about 2 million people in 1770 and didn't _____4_____ much in that four-year period. Basic economics tells us this _____5_____ increase in supply without more customers meant the price of tea had to fall.

SubQuestion No : 19

Q.19 Select the most appropriate option to fill in blank no. 4.

- Ans

 1.

condense

 2.

shrink

 3. expand

 4.

constrict

Comprehension:

In the following passage, some words have been deleted. Read the passage carefully and select the most appropriate option to fill in each blank.

The volume of tea imports into the Colonies rose _____1_____ a very fast rate in the four years _____2_____ up to the Boston Tea Party. They went from 55 tonnes in 1770, which was close to the amount _____3_____ in the harbour, to 370 tonnes the year the tea was dumped. This was an increase of almost seven times. The population of the Colonies was about 2 million people in 1770 and didn't _____4_____ much in that four-year period. Basic economics tells us this _____5_____ increase in supply without more customers meant the price of tea had to fall.

SubQuestion No : 20

Q.20 Select the most appropriate option to fill in blank no. 5.

- Ans ☒ 1. dramatic
- ☐ 2. understated
- ☐ 3. mundane
- ☐ 4. dull

Section : Part-D-Hindi

Q.1 निम्नलिखित वाक्य के किस अंश में त्रुटि है? संबंधों में मधुर्यता होनी आवश्यक है।

- Ans ☒ 1. मधुर्यता
- ☐ 2. होनी
- ☐ 3. आवश्यक
- ☐ 4. संबंधों

Q.2 निम्न वाक्य को शुद्ध कीजिए - इतने अयोग्य आदमी को अच्छी नौकरी मिल गई।

- Ans ☒ 1. इतने अयोग्य आदमी को अच्छी नौकरी मिल गई।
- ☐ 2. इतने अयोग आदमी को अच्छी नौकरी मिल गई।
- ☐ 3. इतने आयोज आदमी को अच्छी नौकरी मिल गई।
- ☐ 4. इतने आयोग्या आदमी को अच्छी नौकरी मिल गई।

Q.3 इनमें से 'रिक्त' का विलोम शब्द कौन-सा है?

- Ans ☒ 1. पूर्ण
- ☐ 2. अधूरा
- ☐ 3. सुपूर्ण
- ☐ 4. अपूर्ण

Q.4 साधु विनम्र होते हैं। उपरोक्त वाक्य में 'विनम्र' शब्द का विलोम पहचानिए।

- Ans ☒ 1. उदंड
- ☐ 2. नम्र
- ☐ 3. शृंखल
- ☐ 4. अनुशासनहीन

Q.5 '_____ छत पर दाना चुग रही थी।' वाक्य के रिक्त स्थान के लिए उपयुक्त देशज शब्द चुनकर वाक्य पूर्ण कीजिए-

- Ans ☐ 1. विहग
- ☒ 2. चिड़िया
- ☐ 3. खग
- ☐ 4. पक्षी

Q.6 'आशा' शब्द का विलोम क्या होगा?

- Ans
- ✓ 1. निराशा
 - ✗ 2. आशावान
 - ✗ 3. आभा
 - ✗ 4. इच्छा

Q.7 निम्नलिखित में से किस शब्द में भाववाचक संज्ञा नहीं है?

- Ans
- ✓ 1. एटलस
 - ✗ 2. ममत्व
 - ✗ 3. गर्मी
 - ✗ 4. घबराहट

Q.8 निम्नलिखित वाक्यांश के लिए सार्थक शब्द चुनिए-
किसी वस्तु या पदार्थ को बेचने वाला

- Ans
- ✗ 1. क्रेता
 - ✓ 2. विक्रेता
 - ✗ 3. अग्रेयता
 - ✗ 4. संग्राहक

Q.9 'नुसरत अब भी अच्छा गाती है।'

सर्वाधिक उपयुक्त विकल्प चुनकर वाक्य के रेखांकित अंश को बदलें-

- Ans
- ✗ 1. सुन्दर
 - ✓ 2. सुरीला
 - ✗ 3. आकर्षक
 - ✗ 4. संगीतमय

Q.10 'जो मुकदमा दायर करता है' वाक्यांश के लिए उपयुक्त शब्द होगा-

- Ans
- ✓ 1. वादी
 - ✗ 2. अधिवक्ता
 - ✗ 3. प्रतिवादी
 - ✗ 4. आरोपी

Q.11 इनमें से किस वाक्य में त्रुटि नहीं है?

- Ans
- ✗ 1. निराशा की किरणों छापी हुई है।
 - ✗ 2. भोजन बहुत सुंदर बना है।
 - ✓ 3. मेरी गुरु जी के प्रति श्रद्धा है।
 - ✗ 4. श्री कृष्ण के अनेकों नाम है।

Q.12 रिक्त स्थान की पूर्ति निरर्थक शब्द से करें-
सोहन को कोई काम नहीं है, वह दिन भर _____ बातें करता रहता है।

- Ans
- ✗ 1. कुछ कुछ
 - ✗ 2. सार्थक
 - ✓ 3. उटपटांग
 - ✗ 4. लंबी

Q.13 निम्नलिखित मुहावरों का कौन सा एक विकल्प खंड शुद्ध है?

- Ans
- ✗

1. भंडा फूटना-विशेष रूप से आमंत्रित करना
- ✓

2. माथे मढ़ना-जबरदस्ती लादना
- ✗

3. मैदान मारना-हानि पहुँचाना
- ✗

4. मौत के घाट उतारना-दुखी होना

Q.14 निम्नलिखित वाक्यांश के लिए सार्थक शब्द चुनिए -
कहीं से नया-नया आया हुआ

- Ans
- ✗

1. नवनिर्मित
- ✗

2. नवजात
- ✓

3. नवागंतुक
- ✗

4. नवोद्गा

Q.15 दिए गए शब्द का उचित विलोम शब्द चुनिए-

सौम्य

- Ans
- ✓

1. उग्र
- ✗

2. सौम्यता
- ✗

3. असहयोग
- ✗

4. क्रोधित

Comprehension:

प्रश्न संख्या 26 से 30 तक के उत्तर दिए गए गद्यांश के आधार पर दीजिए।
दिए गए विकल्पों में से उचित विकल्पों से खाली स्थान भरें।
केंद्र में गठबंधन सरकार की स्थापना प्रक्रिया बहुत बाद में शुरू हुई। भारतीय राष्ट्रीय कांग्रेस ने _____(26) तक एक छत्र राज किया भारत पर, क्योंकि भारतीय जनता का विश्वास उसे स्वतंत्रता-आंदोलन से _____(27) में मिला था। 1970 के दशक तक भारत में कांग्रेस के _____(28) के रूप में कोई भी राजनीतिक दल राष्ट्रीय-स्तर पर नहीं उभरा था। परंतु, 70, के बाद दशक में भारतीय _____(29)में महत्त्वपूर्ण परिवर्तन हुए और भारतीय जनता ने कांग्रेस का विकल्प ढूँढ़ना शुरू कर दिया। परिणामस्वरूप, 1977 में पहली बार सत्ता _____(30) हुआ। 1977 के आम चुनावों में किसी भी राजनीतिक दल को स्पष्ट बहुमत नहीं मिला।

SubQuestion No : 16

Q.16 गद्यांश के रिक्त स्थान की पूर्ति दिए गए विकल्पों में से उचित विकल्प से कीजिए _____

- Ans
- ✗

1. सदियों
- ✗

2. महीनों
- ✓

3. दशकों
- ✗

4. युगों

Comprehension:

प्रश्न संख्या 26 से 30 तक के उत्तर दिए गए गद्यांश के आधार पर दीजिए।
दिए गए विकल्पों में से उचित विकल्पों से खाली स्थान भरें।
केंद्र में गठबंधन सरकार की स्थापना प्रक्रिया बहुत बाद में शुरू हुई। भारतीय राष्ट्रीय कांग्रेस ने _____(26) तक एक छत्र राज किया भारत पर, क्योंकि भारतीय जनता का विश्वास उसे स्वतंत्रता-आंदोलन से _____(27) में मिला था। 1970 के दशक तक भारत में कांग्रेस के _____(28) के रूप में कोई भी राजनीतिक दल राष्ट्रीय-स्तर पर नहीं उभरा था। परंतु, 70, के बाद दशक में भारतीय _____(29)में महत्त्वपूर्ण परिवर्तन हुए और भारतीय जनता ने कांग्रेस का विकल्प ढूँढ़ना शुरू कर दिया। परिणामस्वरूप, 1977 में पहली बार सत्ता _____(30) हुआ। 1977 के आम चुनावों में किसी भी राजनीतिक दल को स्पष्ट बहुमत नहीं मिला।

SubQuestion No : 17

Q.17 गद्यांश के रिक्त स्थान की पूर्ति दिए गए विकल्पों में से उचित विकल्प से कीजिए _____

- Ans
- ✗

1. सियासत
- ✗

2. उपहार
- ✗

3. ईनाम
- ✓

4. विरासत

Comprehension:

प्रश्न संख्या 26 से 30 तक के उत्तर दिए गए गद्यांश के आधार पर दीजिए।

दिए गए विकल्पों में से उचित विकल्पों से खाली स्थान भरें।

केंद्र में गठबंधन सरकार की स्थापना प्रक्रिया बहुत बाद में शुरू हुई। भारतीय राष्ट्रीय कांग्रेस ने _____ (26) तक एक छत्र राज किया भारत पर, क्योंकि भारतीय जनता का विश्वास उसे स्वतंत्रता-आंदोलन से _____ (27) में मिला था। 1970 के दशक तक भारत में कांग्रेस के _____ (28) के रूप में कोई भी राजनीतिक दल राष्ट्रीय-स्तर पर नहीं उभरा था। परंतु, 70, के बाद दशक में भारतीय _____ (29) में महत्वपूर्ण परिवर्तन हुए और भारतीय जनता ने कांग्रेस का विकल्प ढूँढ़ना शुरू कर दिया। परिणामस्वरूप, 1977 में पहली बार सत्ता _____ (30) हुआ। 1977 के आम चुनावों में किसी भी राजनीतिक दल को स्पष्ट बहुमत नहीं मिला।

SubQuestion No : 18

Q.18 गद्यांश के रिक्त स्थान की पूर्ति दिए गए विकल्पों में से उचित विकल्प से कीजिए _____

- Ans**
- ☒ 1. विरोध
 - ☒ 2. विकल्प
 - ☐ 3. सट्टा
 - ☐ 4. स्थान

Comprehension:

प्रश्न संख्या 26 से 30 तक के उत्तर दिए गए गद्यांश के आधार पर दीजिए।

दिए गए विकल्पों में से उचित विकल्पों से खाली स्थान भरें।

केंद्र में गठबंधन सरकार की स्थापना प्रक्रिया बहुत बाद में शुरू हुई। भारतीय राष्ट्रीय कांग्रेस ने _____ (26) तक एक छत्र राज किया भारत पर, क्योंकि भारतीय जनता का विश्वास उसे स्वतंत्रता-आंदोलन से _____ (27) में मिला था। 1970 के दशक तक भारत में कांग्रेस के _____ (28) के रूप में कोई भी राजनीतिक दल राष्ट्रीय-स्तर पर नहीं उभरा था। परंतु, 70, के बाद दशक में भारतीय _____ (29) में महत्वपूर्ण परिवर्तन हुए और भारतीय जनता ने कांग्रेस का विकल्प ढूँढ़ना शुरू कर दिया। परिणामस्वरूप, 1977 में पहली बार सत्ता _____ (30) हुआ। 1977 के आम चुनावों में किसी भी राजनीतिक दल को स्पष्ट बहुमत नहीं मिला।

SubQuestion No : 19

Q.19 गद्यांश के रिक्त स्थान की पूर्ति दिए गए विकल्पों में से उचित विकल्प से कीजिए _____

- Ans**
- ☒ 1. राजनीति
 - ☐ 2. समाज
 - ☐ 3. धर्म
 - ☐ 4. परम्परा

Comprehension:

प्रश्न संख्या 26 से 30 तक के उत्तर दिए गए गद्यांश के आधार पर दीजिए।

दिए गए विकल्पों में से उचित विकल्पों से खाली स्थान भरें।

केंद्र में गठबंधन सरकार की स्थापना प्रक्रिया बहुत बाद में शुरू हुई। भारतीय राष्ट्रीय कांग्रेस ने _____ (26) तक एक छत्र राज किया भारत पर, क्योंकि भारतीय जनता का विश्वास उसे स्वतंत्रता-आंदोलन से _____ (27) में मिला था। 1970 के दशक तक भारत में कांग्रेस के _____ (28) के रूप में कोई भी राजनीतिक दल राष्ट्रीय-स्तर पर नहीं उभरा था। परंतु, 70, के बाद दशक में भारतीय _____ (29) में महत्वपूर्ण परिवर्तन हुए और भारतीय जनता ने कांग्रेस का विकल्प ढूँढ़ना शुरू कर दिया। परिणामस्वरूप, 1977 में पहली बार सत्ता _____ (30) हुआ। 1977 के आम चुनावों में किसी भी राजनीतिक दल को स्पष्ट बहुमत नहीं मिला।

SubQuestion No : 20

Q.20 गद्यांश के रिक्त स्थान की पूर्ति दिए गए विकल्पों में से उचित विकल्प से कीजिए _____

- Ans**
- ☐ 1. स्थानांतरण
 - ☐ 2. स्थापित्व
 - ☐ 3. विकेंद्रीकरण
 - ☒ 4. परिवर्तन