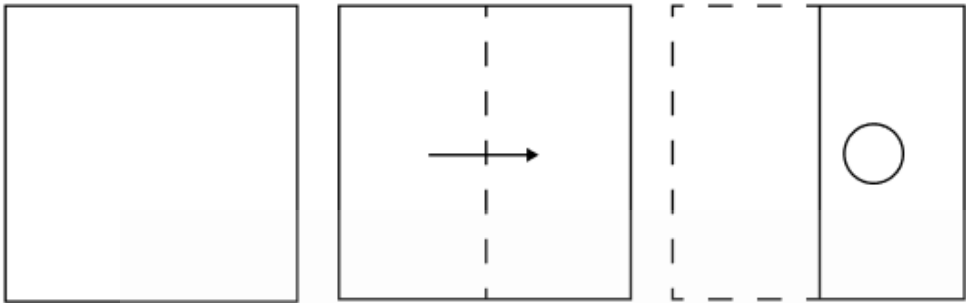


Constable GD in CAPFs and SSF Rifleman GD in AR and Sepoy in NCB Examination 2025

Exam Date	20/02/2025
Exam Time	9:00 AM - 10:00 AM
Subject	Constable GD Examination 2025

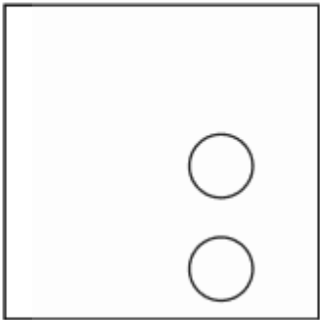
Section : Part-A-General Intelligence and Reasoning

Q.1 A square sheet of paper is folded along the dotted line successively along the directions shown and is then punched after the last fold. How would the paper look when unfolded?

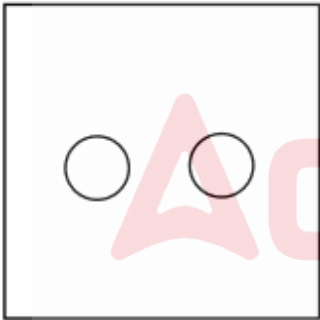


Ans

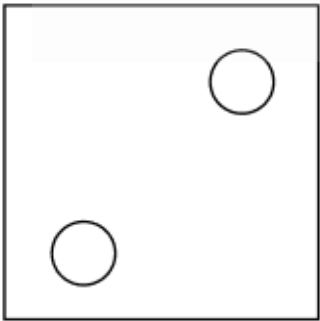
✗ 1.



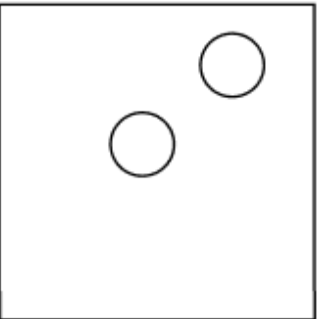
✓ 2.



✗ 3.



✗ 4.



Adda247

Test Prime

ALL EXAMS, ONE SUBSCRIPTION



1,00,000+
Mock Tests



Personalised
Report Card



Unlimited
Re-Attempt



600+
Exam Covered



25,000+ Previous
Year Papers

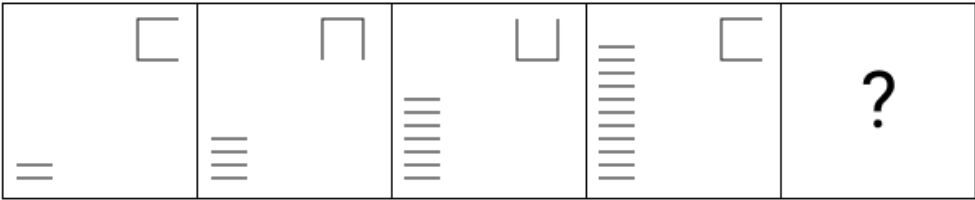


500%
Refund



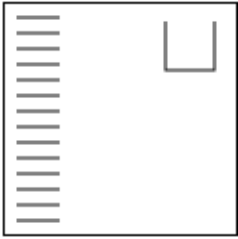
ATTEMPT FREE MOCK NOW

Q.2 Identify the figure given in the options which when put in place of the question mark (?) will logically complete the series.



Ans

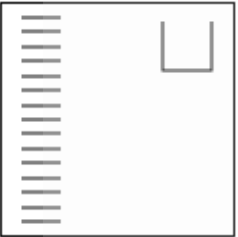
✗ 1.



✓ 2.



✗ 3.



✗ 4.



Q.3 Select the combination of letters that when sequentially placed in the blanks of the given series, will logically complete the series.

_JDIF_EJGL_KHMG_INH_

Ans

✗ 1. CKELO

✗ 2. CIEKO

✓ 3. EKFLM

✗ 4. EIFKM

Q.4 In a certain code language,

'A + B' means 'A is the daughter of B',
'A - B' means 'A is the brother of B',
'A × B' means 'A is the wife of B' and
'A ÷ B' means 'A is the father of B'.

Based on the above, how is P related to T if 'P + Q - R ÷ S × T'?

Ans

✗ 1. Father's brother's wife

✗ 2. Wife's father's brother's wife

✓ 3. Wife's father's brother's daughter

✗ 4. Father's brother's daughter

Q.5 In a certain code language, 'RUST' is coded as '8264' and 'TURN' is coded as '2843'. How is 'S' coded in the given language?

- Ans**
- ☐ 1. 8
 - ☐ 2. 4
 - ☐ 3. 2
 - ☒ 4. 6

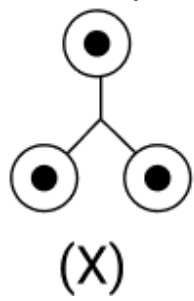
Q.6 MRCS is related to PUFV in a certain way based on the English alphabetical order. In the same way, VOLG is related to YROJ. To which of the given options is SHIM related, following the same logic?

- Ans**
- ☐ 1. VLEJ
 - ☐ 2. VELJ
 - ☒ 3. VKLP
 - ☐ 4. VLKP

Q.7 The position(s) of how many letters will remain unchanged if each letter in the word DELIGHT is arranged in the English alphabetical order?

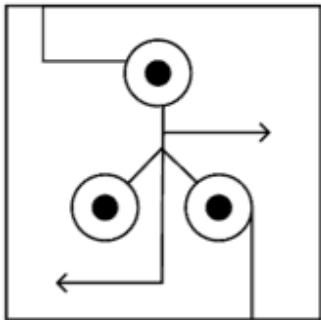
- Ans**
- ☒ 1. Three
 - ☐ 2. Two
 - ☐ 3. Four
 - ☐ 4. One

Q.8 Select the option in which the given figure (X) is embedded (rotation is NOT allowed).

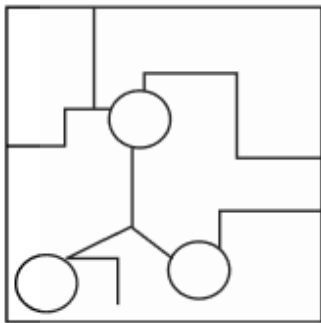


Ans

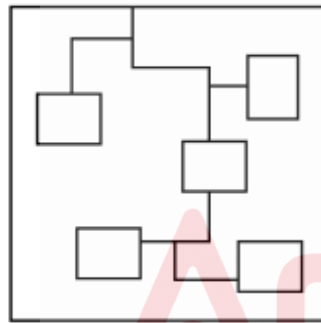
✓ 1.



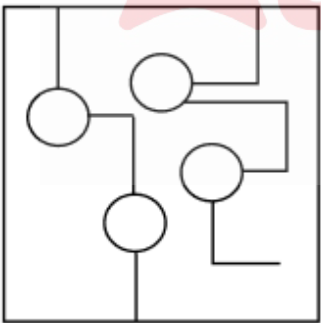
✗ 2.



✗ 3.



✗ 4.



Q.9 RFTQ is related to VKXV in a certain way based on the English alphabetical order. In the same way, DNPJ is related to HSTO. To which of the given options is HLXB related, following the same logic?

Ans

✗ 1. EOLA

✗ 2. NOQX

✗ 3. LEPV

✓ 4. LQBG

Q.10 Read the given statements and conclusions carefully. Assuming that the information given in the statements is true, even if it appears to be at variance with commonly known facts, decide which of the given conclusions logically follow(s) from the statements.

Statements:
All bins are tins.
Some pins are tins.
All fins are tins.

Conclusions:
(I): All pins are tins.
(II): Some bins are fins.

- Ans**
- ☒ 1. Both conclusions (I) and (II) follow.
 - ☒ 2. Only conclusion (I) follows.
 - ☒ 3. Only conclusion (II) follows.
 - ☒ 4. Neither conclusion (I) nor (II) follows.

Q.11 What should come in place of the question mark (?) in the given series?

21 75 120 156 183 ?

- Ans**
- ☒ 1. 201
 - ☒ 2. 213
 - ☒ 3. 226
 - ☒ 4. 219

Q.12 What should come in place of the question mark (?) in the given series?

120, 361, 1084, 3253, 9760, ?

- Ans**
- ☒ 1. 27281
 - ☒ 2. 28281
 - ☒ 3. 26281
 - ☒ 4. 29281

Q.13 What will come in the place of the question mark '?' in the following equation, if '-' and '÷' are interchanged and 'x' and '+' are interchanged?

9 + 56 - 8 x 4 ÷ 9 = ?

- Ans**
- ☒ 1. 56
 - ☒ 2. 57
 - ☒ 3. 58
 - ☒ 4. 59

Q.14 What should come in place of the question mark (?) in the given series based on the English alphabetical order?

ICD MGH QKL UOP ?

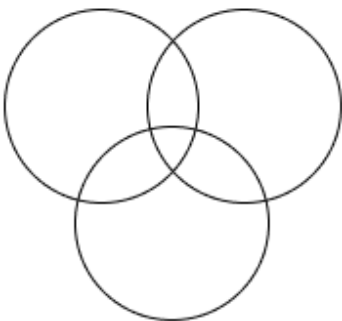
- Ans**
- ☒ 1. VRQ
 - ☒ 2. YST
 - ☒ 3. NOP
 - ☒ 4. NPO

Q.15 Select the Venn diagram that best illustrates the relationship between the following classes.

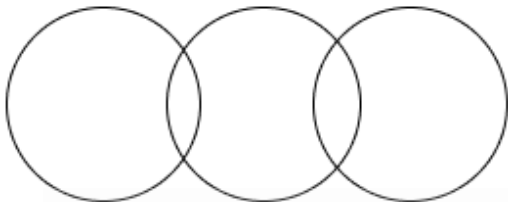
Kings, Queens, Fathers

Ans

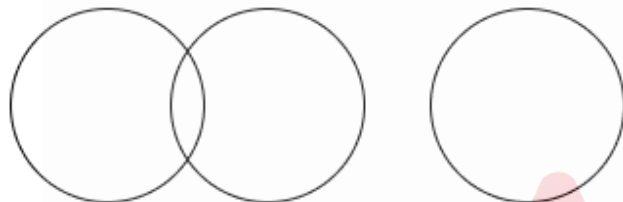
✗ 1.



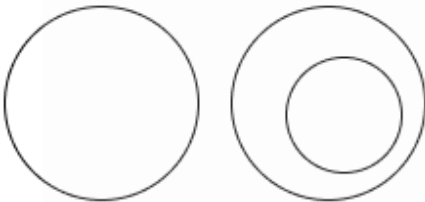
✗ 2.



✓ 3.



✗ 4.



Q.16 Based on the English alphabetical order, three of the following four letter-clusters are alike in a certain way and thus form a group. Which letter-cluster DOES NOT belong to that group?

(Note: The odd man out is not based on the number of consonants/vowels or their position in the letter-cluster.)

Ans

✗ 1. NVD

✓ 2. IOY

✗ 3. JRZ

✗ 4. PXF

Q.17 In a certain code language, 'KIXCUP' is coded as '10' and 'DZYM' is coded as '8'. What is the code for 'RSAWYQI' in the given code language?

Ans

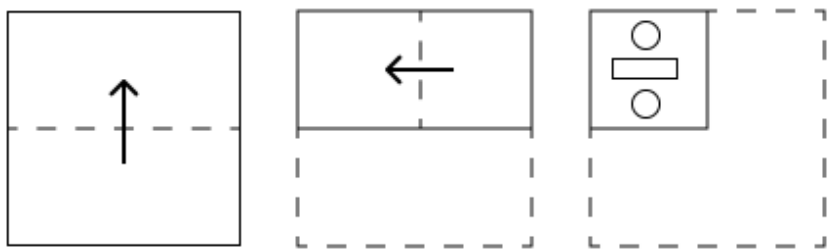
✗ 1. 9

✓ 2. 11

✗ 3. 13

✗ 4. 6

Q.18 A paper is folded and cut as shown below. How will it appear when unfolded?



Ans

- ✗ 1.
- ✗ 2.
- ✓ 3.
- ✗ 4.

Q.19 Seven people, G, H, I, J, K, L and M, are sitting in a row, facing north (but not necessarily in the same order) . Only two people sit between M and I. Only K sits to the right of J. Only one person sits between I and J. G sits at some place to the right of L but at some place to the left of H. How many people sit between H and L?

- Ans

✓ 1. Two

✗ 2. Four

✗ 3. Three

✗ 4. One

Q.20 Seven people, E, F, G, H, K, L and N, are sitting in a row facing north (but not necessarily in the same order) .Only two people sit to the right of K. Only two people sit between K and F. Only two people sit between E and H. H sits to the immediate left of K. N sits to the immediate right of L. How many people sit between G and L?

- Ans

✗ 1. One

✗ 2. Three

✓ 3. Two

✗ 4. Four

Q.1 Who is the Principal Secretary to PM Modi as of September 2024?

- Ans
-  1. Manoj Gupta

 2. Shivshankar Menon

 3. PK Mishra

 4. Kataragama Menon

Q.2 Name the Indian music composer of songs for the film 'Slumdog Millionaire'.


- Ans
-  1. Santosh Narayanan


 2. Pritam Chakraborty


 3. Amit Trivedi


 4. AR Rahman

Q.3 As per Census 2011, what was the child sex ratio of India?

- Ans
-  1. 945

 2. 940

 3. 927

 4. 919

Q.4 Which Five-Year Plan aimed at making India self-reliant and focused on 'Defense and Development' due to external aggression and economic constraints?

- Ans
-  1. Third Plan

 2. Fourth Plan

 3. Sixth Plan

 4. Seventh Plan

Q.5 The Indian Financial System Code (IFSC) is a/ an _____ character code for identifying the bank and branch in which an account is held.

- Ans
-  1. Eight

 2. Fifteen

 3. Eleven

 4. Thirteen

Q.6 Under which Articles of the Indian Constitution are the Fundamental Rights enshrined?

- Ans
-  1. Articles 10-32

 2. Articles 12-35

 3. Articles 14-24

 4. Articles 18-45

Q.7 Which country won the 4th Asian Kho-Kho Championship 2023 event in the women's category?

- Ans
-  1. India

 2. Indonesia

 3. South Korea

 4. Iran

Q.8 Who was honoured with the Dadasaheb Phalke Award in October 2024?

- Ans
-  1. Shah Rukh Khan

 2. Amitabh Bachchan

 3. Rajinikanth

 4. Mithun Chakraborty

Q.9 According to the Constitution of India, what is the maximum tenure of the election commissioner of India?

- Ans
- ☐ 1. Eight years
 - ☐ 2. Three years
 - ☐ 3. Five years
 - ☒ 4. Six years

Q.10 Who among the following founded the Abhinav Bharat Mandir (Young India Society)?

- Ans
- ☒ 1. Vinayak Damodar Savarkar and Ganesh Damodar Savarkar
 - ☐ 2. BR Ambedkar and C Rajgopalachari
 - ☐ 3. Aurobindo Ghosh and Dadabhai Naoroji
 - ☐ 4. Motilal Nehru and CR Das

Q.11 Konark festival is celebrated in which of the following states?

- Ans
- ☒ 1. Odisha
 - ☐ 2. Manipur
 - ☐ 3. Andhra Pradesh
 - ☐ 4. Kerala

Q.12 To which of the following Indian states does Mohiniattam classical dance form belong?

- Ans
- ☐ 1. Andhra Pradesh
 - ☐ 2. Karnataka
 - ☐ 3. Maharashtra
 - ☒ 4. Kerala

Q.13 In which year was Aatmanirbhar Bharat Rojgar Yojana launched by the government of India?

- Ans
- ☒ 1. 2020
 - ☐ 2. 2019
 - ☐ 3. 2018
 - ☐ 4. 2017

Q.14 From where does the river Indus enter India?

- Ans
- ☐ 1. Kashmir valley
 - ☐ 2. It does not flow in India.
 - ☐ 3. Gilgit
 - ☒ 4. Ladakh

Q.15 Select the correct sequence of materials put one after the other as per the order of element, compound, and homogeneous mixture.

- Ans
- ☐ 1. Salt, iron and sea water
 - ☐ 2. Mercury, iron, and diluted acid
 - ☐ 3. Mercury, salt and milk
 - ☒ 4. Iron, methane and sea water

Q.16 Gadgil formula is concerned with:

- Ans
- ☐ 1. distribution of natural resources to the states
 - ☒ 2. distribution of Central Assistance among the state
 - ☐ 3. distribution of subsidies
 - ☐ 4. distribution of foreign investments

Q.17 What is the concept of ecological niche?

- Ans
- ✓ 1. Ecological niche refers to a species' specific role in an ecosystem.
 - ✗ 2. Ecological niche is solely determined by an organism's habitat.
 - ✗ 3. Ecological niche refers to the genetic diversity within a species.
 - ✗ 4. Ecological niche refers to the physical space a species occupies.

Q.18 In which tournament in 2018 did Neeraj Chopra become the first Indian javelin thrower to win a gold medal?

- Ans
- ✗ 1. World Championships
 - ✗ 2. Olympic Games
 - ✓ 3. Asian Games
 - ✗ 4. Asian U20 Championships

Q.19 Which Iranian-origin group was known in Indian sources as Shaka-Pahlava?

- Ans
- ✗ 1. Kushanas
 - ✓ 2. Parthians
 - ✗ 3. Indo-Greeks
 - ✗ 4. Shakas

Q.20 Saroja Vaidyanathan, the recipient of Padma Shri in 2002 and Padma Bhushan in 2013 is a dancer of which classical dance form?

- Ans
- ✓ 1. Bharatanatyam
 - ✗ 2. Kathak
 - ✗ 3. Manipuri
 - ✗ 4. Odissi

Section : Part-C-Elementary Mathematics

Q.1 The average weight of Mukund, Sachin and Chetan is 46 kg. If the average weight of Mukund and Sachin be 39 kg and that of Sachin and Chetan be 45 kg, then the weight of Sachin (in kg) is:

- Ans
- ✗ 1. 50
 - ✗ 2. 45
 - ✗ 3. 40
 - ✓ 4. 30

Q.2 The LCM of 42, 36, 312 and 126 is:

- Ans
- ✗ 1. 6587
 - ✗ 2. 6616
 - ✗ 3. 6520
 - ✓ 4. 6552

Q.3 A bus covers a distance of 30 km in 45 minutes and further it covers double the distance covered earlier in 60 minutes. The average speed of the bus is _____ km/hr (rounded off to two decimal places).

- Ans
- ✓ 1. 51.43
 - ✗ 2. 55.41
 - ✗ 3. 54.31
 - ✗ 4. 53.14

Q.4 What is the highest number between 5000 and 5500, which when divided by 12, 16 and 24, would leave a remainder 9?

- Ans**
- ☐ 1. 5184
 - ☐ 2. 5148
 - ☐ 3. 5814
 - ☒ 4. 5481

Q.5 The marked price of an article is 30% above the cost price, and the article is sold at 10% less than the marked price. The profit percentage is:

- Ans**
- ☐ 1. 15%
 - ☐ 2. 19%
 - ☐ 3. 13%
 - ☒ 4. 17%

Q.6 Evaluate: $32 \div 8 \times 3 - 3 \times 4$

- Ans**
- ☒ 1. 0
 - ☐ 2. 2
 - ☐ 3. 3
 - ☐ 4. -1

Q.7 Kanchan bought a ring and sold it to Mohan at a profit of 5%. Mohan sold it to Pramod at a loss of 25%. If Pramod paid ₹3150, then the cost price (in ₹) of the ring Kanchan bought is

- Ans**
- ☒ 1. 4000
 - ☐ 2. 3750
 - ☐ 3. 3800
 - ☐ 4. 4150

Q.8 The simple interest on a principal amount (in ₹) is ₹177 for a period of 5 years at the rate of 2% per annum. The principal amount (in ₹) is:

- Ans**
- ☐ 1. 1764
 - ☐ 2. 1773
 - ☐ 3. 1771
 - ☒ 4. 1770

Q.9 The first and second numbers are, respectively, 35% and 45% less than the third number. The second number is what percentage of the first number?

- Ans**
- ☐ 1. $64\frac{7}{12}\%$
 - ☐ 2. $79\frac{2}{19}\%$
 - ☐ 3. $68\frac{9}{16}\%$
 - ☒ 4. $84\frac{8}{13}\%$

Q.10 The LCM of 40, 20, 195 and 160 is:

- Ans**
- ☐ 1. 6169
 - ☐ 2. 6319
 - ☒ 3. 6240
 - ☐ 4. 6219

Q.11 A pipe can fill a water tank in 36 minutes, and another can fill it in 48 minutes, but a third pipe can empty it in 18 minutes.
The first two pipes are kept open for 16 minutes at the beginning, and then the third pipe is also opened. How long does it take to empty the tank?

- Ans** ☒ 1. 85 minutes
☒ 2. 112 minutes
☒ 3. 120 minutes
☒ 4. 98 minutes

Q.12 Veer has ₹1617 with him. He divided it amongst his sons Nitin and Pravin and asked them to invest it at 10% rate of interest compounded annually. It was seen that Nitin and Pravin got same amount after 16 and 17 years respectively. How much (in ₹) did Veer give to Nitin?

- Ans** ☒ 1. 847
☒ 2. 697
☒ 3. 870
☒ 4. 770

Q.13 Ravi travels from City A to City B. If Ravi drives his car at $\frac{2}{3}$ of his normal speed, then he reaches City B 47 minutes late.
Find the time (in minutes) that Ravi would have taken to travel from City A to City B if he drove at his normal speed.

- Ans** ☒ 1. 100
☒ 2. 94
☒ 3. 84
☒ 4. 102

Q.14 Find the volume of a cylinder with radius of base 7 cm and height 10.2 cm. (Use $\pi = \frac{22}{7}$.)

- Ans** ☒ 1. 1570.8 cm³
☒ 2. 1573.8 cm³
☒ 3. 1572.8 cm³
☒ 4. 1571.8 cm³

Q.15 The price (per litre) of petrol increases by 80%. By what percent should its consumption be reduced such that the expenditure on it increases by 17% only?

- Ans** ☒ 1. 66%
☒ 2. 65%
☒ 3. 35%
☒ 4. 48%

Q.16 Find the mean proportion of 5.76 and 0.88. (rounded off to two decimal places)

- Ans** ☒ 1. 2.25
☒ 2. 2.85
☒ 3. 2.54
☒ 4. 2.34

Q.17 A retailer offers a discount scheme where customers receive a 10% discount on purchases between ₹1,000 and ₹5,000, and a 20% discount on purchases above ₹5,000. If a customer buys goods worth ₹6,000, how much will they save (in ₹) compared to the original price?

- Ans** ☒ 1. 1,000
☒ 2. 1,100
☒ 3. 1,200
☒ 4. 1,300

Q.18 The rate of advertisement on a TV channel is directly proportional to the duration of the advertisement. If the rate of an advertisement of 20 seconds is ₹1,25,000, then the rate of an advertisement of 25 seconds will be ₹_____.

- Ans

☐ 1. 1,55,620

☐ 2. 1,65,250

☒ 3. 1,56,250

☐ 4. 1,62,550

Q.19 Five persons in a group have salaries of ₹15,000, ₹25,000, ₹30,000, ₹12,000 and ₹18,000, respectively. What is the average salary (in ₹) per person of the group?

- Ans

☐ 1. 18,000

☒ 2. 20,000

☐ 3. 21,000

☐ 4. 19,000

Q.20 Rodney has two grandsons Amit and Gopal. 11 year old Amit gets some money from Rodney's wealth and 12 year old Gopal gets rest of the money. But Amit and Gopal will get money only when they turn 23 years old. Till then the money is in a bank getting interest at rate 10% compounded annually. When both turn 23, they receive the same amount. How much had Rodney given Gopal (in ₹) initially, if total money with Rodney was ₹23100?

- Ans

☐ 1. 12450

☐ 2. 11000

☒ 3. 12100

☐ 4. 10750

Section : Part-D-English

Q.1 Select the most appropriate option to fill in the blank.

Throughout our day-to-day interactions, there are _____ when we might choose to keep certain information to ourselves.

- Ans

☐ 1. timings

☐ 2. sometimes

☒ 3. times

☐ 4. anytime

Q.2 Select the most appropriate option to fill in the blanks.

The new smartphone had a (1)_____ design, responsive (2)_____, and impressive camera, making it one of the most (3)_____ gadgets in the market.

- Ans

☐ 1. (1) sought-after ; (2) sleek ; (3) interface

☐ 2. (1) interface ; (2) sought-after ; (3) sleek

☐ 3. (1) interface ; (2) sleek ; (3) sought-after

☒ 4. (1) sleek ; (2) interface ; (3) sought-after

Q.3 Select the most appropriate synonym of the word in the brackets to fill in the blank.

Jintu is such a _____(funny) person.

- Ans

☐ 1. tall

☐ 2. bad

☒ 3. humorous

☐ 4. cold

Q.4 Select the most appropriate synonym of the given word.

Rudimentary

- Ans
- ☒ 1. Intricate
 - ☒ 2. Elementary
 - ☒ 3. Advanced
 - ☒ 4. Complex

Q.5 Select the most appropriate synonym of the given word.

Luxuriant

- Ans
- ☒ 1. Leafless
 - ☒ 2. Bleak
 - ☒ 3. Lush
 - ☒ 4. Barren

Q.6 Select the most appropriate idiom that can substitute the highlighted segment in the given sentence.
She was feeling under the weather, so she decided to go to bed in order to sleep.

- Ans
- ☒ 1. bark up the wrong tree
 - ☒ 2. cry over spilled milk
 - ☒ 3. break a leg
 - ☒ 4. hit the sack

Q.7 Select the INCORRECTLY spelt word from the given options.

- Ans
- ☒ 1. Battery
 - ☒ 2. Begining
 - ☒ 3. Bough
 - ☒ 4. Barrister

Q.8 The given sentence is divided into four segments. Select the option that has the segment with an adverbial usage error.

On the occasion of Teacher’s Day, / the students of the community school / light applauded the performance / of the teachers.

- Ans
- ☒ 1. of the teachers.
 - ☒ 2. light applauded the performance
 - ☒ 3. On the occasion of Teacher’s Day,
 - ☒ 4. the students of the community school

Q.9 Select the most appropriate ANTONYM of the given word.

Capable

- Ans
- ☒ 1. Considerate
 - ☒ 2. Incompetent
 - ☒ 3. Troublesome
 - ☒ 4. Garrulous

Q.10 The following sentence has been split into four segments. Identify the segment that contains a grammatical error.
(A) The dog barked loudly at the stranger, / (B) standing protective / (C) in front of its owner / (D) and alerting everyone in the vicinity.

- Ans
- ☒ 1. C
 - ☒ 2. A
 - ☒ 3. D
 - ☒ 4. B

Q.11 Select the most appropriate option that can substitute the highlighted word segment in the given sentence. If the sentence is grammatically correct, select 'No correction'.

The report has written by the analyst.

- Ans
- ☒ 1. was writing
 - ☒ 2. was written
 - ☒ 3. No correction
 - ☒ 4. written

Q.12 Select the most appropriate option that can substitute the underlined segment in the given sentence.

I will never forget the feeling of receiving a prestigious award, with my parents sitting among the audience and jostling with their emotion.

- Ans
- ☒ 1. hiding their nervousness
 - ☒ 2. supporting my fear
 - ☒ 3. pray for me
 - ☒ 4. applauding my success

Q.13 Select the most appropriate ANTONYM of the given word.

Strategic

- Ans
- ☒ 1. Hazy
 - ☒ 2. Cruel
 - ☒ 3. Trivial
 - ☒ 4. Wise

Q.14 Select the most appropriate option to fill in the blank.

Despite initial problems, the plan has been a _____ success.

- Ans
- ☒ 1. loud
 - ☒ 2. roaring
 - ☒ 3. sounding
 - ☒ 4. cracking

Q.15 Select the INCORRECTLY spelt word.

- Ans
- ☒ 1. Allegience
 - ☒ 2. Subservience
 - ☒ 3. Adherence
 - ☒ 4. Reverence

Comprehension:


In the following passage, some words have been deleted. Read the passage carefully and answer the questions that follow to select the most appropriate option to fill in each blank.


The impact of climate change on global agriculture is (1) _____ concern among scientists and policymakers. Rising temperatures and unpredictable weather patterns (2) _____ crop yields and food security. Droughts and floods, which are becoming increasingly frequent due to climate variability, (3) _____ the agricultural output in many regions. Consequently, farmers (4) _____ innovative strategies and technologies to (5) _____ their resilience to these changes.


SubQuestion No : 16


Q.16 Select the most appropriate option to fill in blank number 1.

- Ans

 1. a decreasing

 2. a stable

 3. an increasing

 4. an irrelevant

Comprehension:

In the following passage, some words have been deleted. Read the passage carefully and answer the questions that follow to select the most appropriate option to fill in each blank.

The impact of climate change on global agriculture is (1) _____ concern among scientists and policymakers. Rising temperatures and unpredictable weather patterns (2) _____ crop yields and food security. Droughts and floods, which are becoming increasingly frequent due to climate variability, (3) _____ the agricultural output in many regions. Consequently, farmers (4) _____ innovative strategies and technologies to (5) _____ their resilience to these changes.

SubQuestion No : 17

Q.17 Select the most appropriate option to fill in blank number 2.

- Ans

 1. stabilise

 2. promote

 3. enhance

 4. jeopardise

Comprehension:

In the following passage, some words have been deleted. Read the passage carefully and answer the questions that follow to select the most appropriate option to fill in each blank.

The impact of climate change on global agriculture is (1) _____ concern among scientists and policymakers. Rising temperatures and unpredictable weather patterns (2) _____ crop yields and food security. Droughts and floods, which are becoming increasingly frequent due to climate variability, (3) _____ the agricultural output in many regions. Consequently, farmers (4) _____ innovative strategies and technologies to (5) _____ their resilience to these changes.

SubQuestion No : 18

Q.18 Select the most appropriate option to fill in blank number 3.

- Ans

 1. diminish

 2. increase

 3. augment

 4. bolster

Comprehension:

In the following passage, some words have been deleted. Read the passage carefully and answer the questions that follow to select the most appropriate option to fill in each blank.

The impact of climate change on global agriculture is (1) _____ concern among scientists and policymakers. Rising temperatures and unpredictable weather patterns (2) _____ crop yields and food security. Droughts and floods, which are becoming increasingly frequent due to climate variability, (3) _____ the agricultural output in many regions. Consequently, farmers (4) _____ innovative strategies and technologies to (5) _____ their resilience to these changes.

SubQuestion No : 19

Q.19 Select the most appropriate option to fill in blank number 4.

- Ans

✗ 1. employs

✗ 2. employing

✗ 3. employed

✓ 4. employ

Comprehension:

In the following passage, some words have been deleted. Read the passage carefully and answer the questions that follow to select the most appropriate option to fill in each blank.

The impact of climate change on global agriculture is (1) _____ concern among scientists and policymakers. Rising temperatures and unpredictable weather patterns (2) _____ crop yields and food security. Droughts and floods, which are becoming increasingly frequent due to climate variability, (3) _____ the agricultural output in many regions. Consequently, farmers (4) _____ innovative strategies and technologies to (5) _____ their resilience to these changes.

SubQuestion No : 20

Q.20 Select the most appropriate option to fill in blank number 5.

- Ans

✗ 1. compromise

✗ 2. reduce

✗ 3. accept

✓ 4. enhance

Section : Part-D-Hindi

Q.1 'नीरद' पर्याय है-

- Ans

✗ 1. सरस्वती का

✗ 2. विष्णु का

✓ 3. बादल का

✗ 4. कमल का

Q.2 'जब मदारी डमरू बजा रहा था तब बन्दर नाच रहा था।' निम्नलिखित विकल्पों में से इस वाक्य के लिए कौन सा एक उचित संयुक्त वाक्य होगा?

- Ans

✗ 1. बन्दर नाच रहा था, मदारी डमरू बजा रहा था ।

✗ 2. जब मदारी के डमरू पर बन्दर नाच रहा था।

✗ 3. मदारी डमरू बजा रहा था बन्दर नाच रहा था।

✓ 4. जब मदारी डमरू बजा रहा था और बन्दर नाच रहा था।

Q.3 निम्नलिखित वाक्य को विदेशज शब्द के माध्यम से पूर्ण करें।

_____ साहब ने सभी हवलदारों की अच्छी परेड करवाई।

- Ans

✗ 1. पट्टिका

✗ 2. आश्विन

✓ 3. कमिश्नर

✗ 4. अक्षवाट

Q.4 मुहावरे और उसके अर्थ के लिए सही विकल्प चुनें।
अकड़ दिखाना

- Ans
- ☒ 1. घमंड कराना
 - ☒ 2. अकड़ कर खड़े रहना
 - ☒ 3. घमंड करना
 - ☒ 4. शरीर कड़ा करना

Q.5 यह नाटक बहुत अच्छे है। - पुल्लिङ्ग की दृष्टि से वाक्य का शुद्ध रूप है-

- Ans
- ☒ 1. यह नाटक बहुत अच्छी है।
 - ☒ 2. यह नाटक बहुत अच्छा है।
 - ☒ 3. यह नाटक अच्छा था।
 - ☒ 4. नाटक अच्छा हो सकता है।

Q.6 'पितृश्रवा' का उचित तद्भव रूप चुनकर वाक्य पूर्ण करें-
यह उसकी _____ है।

- Ans
- ☒ 1. बुआ
 - ☒ 2. पतोहू
 - ☒ 3. मौसी
 - ☒ 4. परछाई

Q.7 लिंग- निर्णय की दृष्टि से, निम्नलिखित में से किस द्रव का नाम स्त्रीलिंग में होता है?

- Ans
- ☒ 1. मट्ठा
 - ☒ 2. लस्सी
 - ☒ 3. शरबत
 - ☒ 4. पानी

Q.8 रेखांकित शब्द के विलोम से दिया गया वाक्य पूर्ण करें-

निर्मल हृदय में ही ईश्वर का वास होता है _____ हृदय में तो शैतान ही बसता है।

- Ans
- ☒ 1. निष्ठुर
 - ☒ 2. कुटिल
 - ☒ 3. मलिन
 - ☒ 4. अस्वच्छ

Q.9 निम्नलिखित वाक्य के किस खंड में अशुद्धि है?

सांस्कृतिक जागृति के बाद राष्ट्रिय जागृति आती है।

- Ans
- ☒ 1. जागृति
 - ☒ 2. आती
 - ☒ 3. राष्ट्रिय
 - ☒ 4. सांस्कृतिक

Q.10 'अंक' शब्द का अनेकार्थी निम्न में से कौन सा असंगत है ?

- Ans
- ☒ 1. गोद
 - ☒ 2. नाटक का भाग
 - ☒ 3. धागा
 - ☒ 4. संख्या

Q.11 यह झील प्राकृतिक है।

रेखांकित शब्द के उचित विलोम शब्द का चयन कीजिए।

- Ans
- ☒ 1. बनावटी
 - ☒ 2. विलुप्त
 - ☒ 3. कृत्रिम
 - ☒ 4. गैरप्राकृतिक

Q.12 निम्नलिखित वाक्य में रेखांकित पद के बदले कौन सा विकल्प उपयुक्त होगा?
बूढ़ी काकी जूठी पत्तलों को खाने लगी।

- Ans
- ☒ 1. चाटने
 - ☒ 2. चबाने
 - ☒ 3. निगलने
 - ☒ 4. देखने

Q.13 इनमें से 'संकीर्ण' का विलोम शब्द कौन-सा है?

- Ans
- ☒ 1. विस्तीर्ण
 - ☒ 2. विकिरण
 - ☒ 3. प्रकीर्ण
 - ☒ 4. अवतीर्ण

Q.14 वर्तनी की दृष्टि से दिए गए वाक्य के त्रुटि वाले अंश को पहचानें—

तूफानी बारिश के कारण गाँववाले अनिष्ट की आशंका से काँप उठे।

- Ans
- ☒ 1. तूफानी बारिश
 - ☒ 2. अनिष्ट की आशंका
 - ☒ 3. के कारण गाँववाले
 - ☒ 4. से काँप उठे।

Q.15 दिए गए वाक्य में शब्द या वाक्य खण्ड को बदलिए।

मैं गाने का कसरत कर रहा हूँ।

- Ans
- ☒ 1. मैं गाने का अभ्यास कर रहा हूँ।
 - ☒ 2. मैं गाना का कसरत ही कर रहा हूँ।
 - ☒ 3. मैं गाने का ही कसरत करता हूँ।
 - ☒ 4. मैं गाने की कसरत कर रहा हूँ।

Comprehension:

गद्यांश के आधार पर प्रश्न का उत्तर दें

महाराज शांतनु का सत्यवती से _____ हुआ और उससे उनके दो पुत्र हुए चित्रांगद और विचित्रवीर्य। चित्रांगद निःसंतान मरे और विचित्रवीर्य को धृतराष्ट्र और पांडु नामक दो पुत्र उत्पन्न हुए। धृतराष्ट्र जन्मांध थे अतः राज्यगद्दी पांडु को प्राप्त हुई। धृतराष्ट्र के सौ पुत्र हुए जिनमें _____ सबसे बड़ा था। पांडु के क्रमशः युधिष्ठिर, भीम, अर्जुन, नकुल और सहदेव पांच पुत्र हुए। धृतराष्ट्र के पुत्र _____ तथा पांडु के पुत्र पांडव कहे जाते थे। अर्जुन _____ में, भीम मल्लयुद्ध में अद्वितीय थे। दुर्योधन पांडवों से ईर्ष्या रखता था। भीष्म ने इन राजकुमारों की शिक्षा-दीक्षा का उचित प्रबंध किया था। _____ उनके पितामह लगते थे।

SubQuestion No : 16

Q.16 महाराज शांतनु का सत्यवती से _____ हुआ।
गद्यांश की पंक्ति में रिक्त स्थान की पूर्ति हेतु उपयुक्त शब्द होगा-

- Ans
- ☒ 1. युद्ध
 - ☒ 2. संघर्ष
 - ☒ 3. समझौता
 - ☒ 4. विवाह

Comprehension:

गद्यांश के आधार पर प्रश्न का उत्तर दें
महाराज शांतनु का सत्यवती से _____ हुआ और उससे उनके दो पुत्र हुए चित्रांगद और विचित्रवीर्य। चित्रांगद निःसंतान मरे और विचित्रवीर्य को धृतराष्ट्र और पांडु नामक दो पुत्र उत्पन्न हुए। धृतराष्ट्र जन्मांध थे अतः राज्यगद्दी पांडु को प्राप्त हुई। धृतराष्ट्र के सौ पुत्र हुए जिनमें _____ सबसे बड़ा था। पांडु के क्रमशः युधिष्ठिर, भीम, अर्जुन, नकुल और सहदेव पांच पुत्र हुए। धृतराष्ट्र के पुत्र _____ तथा पांडु के पुत्र पांडव कहे जाते थे। अर्जुन _____ में, भीम मल्लयुद्ध में अद्वितीय थे। दुर्योधन पांडवों से ईर्ष्या रखता था। भीष्म ने इन राजकुमारों की शिक्षा-दीक्षा का उचित प्रबंध किया था। _____ उनके पितामह लगते थे।

SubQuestion No : 17

Q.17 धृतराष्ट्र के सौ पुत्र हुए जिनमें _____ सबसे बड़ा था।
गद्यांश की पंक्ति में रिक्त स्थान की पूर्ति हेतु उपयुक्त शब्द होगा-

- Ans ☒ 1. कर्ण
☒ 2. दुर्योधन
☒ 3. दुशासन
☒ 4. युधिष्ठिर

Comprehension:

गद्यांश के आधार पर प्रश्न का उत्तर दें
महाराज शांतनु का सत्यवती से _____ हुआ और उससे उनके दो पुत्र हुए चित्रांगद और विचित्रवीर्य। चित्रांगद निःसंतान मरे और विचित्रवीर्य को धृतराष्ट्र और पांडु नामक दो पुत्र उत्पन्न हुए। धृतराष्ट्र जन्मांध थे अतः राज्यगद्दी पांडु को प्राप्त हुई। धृतराष्ट्र के सौ पुत्र हुए जिनमें _____ सबसे बड़ा था। पांडु के क्रमशः युधिष्ठिर, भीम, अर्जुन, नकुल और सहदेव पांच पुत्र हुए। धृतराष्ट्र के पुत्र _____ तथा पांडु के पुत्र पांडव कहे जाते थे। अर्जुन _____ में, भीम मल्लयुद्ध में अद्वितीय थे। दुर्योधन पांडवों से ईर्ष्या रखता था। भीष्म ने इन राजकुमारों की शिक्षा-दीक्षा का उचित प्रबंध किया था। _____ उनके पितामह लगते थे।

SubQuestion No : 18

Q.18 धृतराष्ट्र के पुत्र _____ तथा पांडु के पुत्र पांडव कहे जाते थे।
गद्यांश की पंक्ति में रिक्त स्थान की पूर्ति हेतु उपयुक्त शब्द होगा-

- Ans ☒ 1. गौरव
☒ 2. यदु
☒ 3. वसु
☒ 4. कौरव

Comprehension:

गद्यांश के आधार पर प्रश्न का उत्तर दें
महाराज शांतनु का सत्यवती से _____ हुआ और उससे उनके दो पुत्र हुए चित्रांगद और विचित्रवीर्य। चित्रांगद निःसंतान मरे और विचित्रवीर्य को धृतराष्ट्र और पांडु नामक दो पुत्र उत्पन्न हुए। धृतराष्ट्र जन्मांध थे अतः राज्यगद्दी पांडु को प्राप्त हुई। धृतराष्ट्र के सौ पुत्र हुए जिनमें _____ सबसे बड़ा था। पांडु के क्रमशः युधिष्ठिर, भीम, अर्जुन, नकुल और सहदेव पांच पुत्र हुए। धृतराष्ट्र के पुत्र _____ तथा पांडु के पुत्र पांडव कहे जाते थे। अर्जुन _____ में, भीम मल्लयुद्ध में अद्वितीय थे। दुर्योधन पांडवों से ईर्ष्या रखता था। भीष्म ने इन राजकुमारों की शिक्षा-दीक्षा का उचित प्रबंध किया था। _____ उनके पितामह लगते थे।

SubQuestion No : 19

Q.19 अर्जुन _____ में, भीम मल्लयुद्ध में अद्वितीय थे।
गद्यांश की पंक्ति में रिक्त स्थान की पूर्ति हेतु उपयुक्त शब्द होगा-

- Ans ☒ 1. गदा युद्ध
☒ 2. द्वंद्व युद्ध
☒ 3. तलवारबाजी
☒ 4. धनुर्विद्या

Comprehension:

गद्यांश के आधार पर प्रश्न का उत्तर दें
महाराज शांतनु का सत्यवती से _____ हुआ और उससे उनके दो पुत्र हुए चित्रांगद और विचित्रवीर्य। चित्रांगद निःसंतान मरे और विचित्रवीर्य को धृतराष्ट्र और पांडु नामक दो पुत्र उत्पन्न हुए। धृतराष्ट्र जन्मांध थे अतः राज्यगद्दी पांडु को प्राप्त हुई। धृतराष्ट्र के सौ पुत्र हुए जिनमें _____ सबसे बड़ा था। पांडु के क्रमशः युधिष्ठिर, भीम, अर्जुन, नकुल और सहदेव पांच पुत्र हुए। धृतराष्ट्र के पुत्र _____ तथा पांडु के पुत्र पांडव कहे जाते थे। अर्जुन _____ में, भीम मल्लयुद्ध में अद्वितीय थे। दुर्योधन पांडवों से ईर्ष्या रखता था। भीष्म ने इन राजकुमारों की शिक्षा-दीक्षा का उचित प्रबंध किया था। _____ उनके पितामह लगते थे।

SubQuestion No : 20

Q.20 _____ उनके पितामह लगते थे।
गद्यांश की पंक्ति में रिक्त स्थान की पूर्ति हेतु उपयुक्त शब्द होगा-

- Ans ☒ 1. शांतनु
☒ 2. धृतराष्ट्र
☒ 3. पांडु
☒ 4. भीष्म