

Constable GD in CAPFs and SSF Rifleman GD in AR and Sepoy in NCB Examination 2025

Exam Date	17/02/2025
Exam Time	12:00 PM - 1:00 PM
Subject	Constable GD Examination 2025

Section : Part-A-General Intelligence and Reasoning

Q.1 Read the given statements and conclusions carefully. Assuming that the information given in the statements is true, even if it appears to be at variance with commonly known facts, decide which of the given conclusions logically follow(s) from the statements.

Statements:

All cubs are foals.

All cubs are puppies.

All kittens are puppies.

Conclusions:

(I): All kittens are foals.

(II): Some puppies are foals.

- Ans
- ✗ 1. Only conclusion (I) follows.
 - ✗ 2. Both conclusions (I) and (II) follow.
 - ✓ 3. Only conclusion (II) follows.
 - ✗ 4. Neither conclusion (I) nor (II) follows.

Q.2 Identify the figure given in the options which when put in place of the question mark (?) will logically complete the series.

M M	M M N	M M M N	M M M M M	?
--------	-------------	------------------	-----------------------	---

Ans

✗ 1.

M
M
M
M
MMM

✗ 2.

M
M
M
M
MM

✗ 3.

M
M
M
M
MMMI

✓ 4.

M
M
M
M
MM

Adda247

Test Prime

ALL EXAMS, ONE SUBSCRIPTION



1,00,000+
Mock Tests



**Personalised
Report Card**



**Unlimited
Re-Attempt**



600+
Exam Covered



25,000+ Previous
Year Papers



500%
Refund



ATTEMPT FREE MOCK NOW

Q.3 Based on the English alphabetical order, three of the following four letter-clusters are alike in a certain way and thus form a group. Which letter-cluster DOES NOT belong to that group?

(Note: The odd man out is not based on the number of consonants/vowels or their position in the letter-cluster.)

- Ans
- ☒ 1. AEC
 - ☒ 2. CHE
 - ☒ 3. LPN
 - ☒ 4. TXV

Q.4 VF 19 is related to YB -2 in a certain way. In the same way, TX 11 is related to WT -10. To which of the following is PL 6 related following the same logic?

- Ans
- ☒ 1. RH -16
 - ☒ 2. HT -14
 - ☒ 3. SH -15
 - ☒ 4. HR -13

Q.5 Seven people, E, F, G, H, K, L and N, are sitting in a row facing north (but not necessarily in the same order) .Only two people sit to the left of N. Only three people sit between N and H. Only one person sits between H and F. K sits to the immediate left of L. E is not an immediate neighbour of H. How many people sit to the left of G?

- Ans
- ☒ 1. Two
 - ☒ 2. One
 - ☒ 3. Five
 - ☒ 4. Four

Q.6 What should come in place of the question mark (?) in the given series?

623 625 629 635 643 ?


- Ans
- ☒ 1. 656
 - ☒ 2. 655
 - ☒ 3. 653
 - ☒ 4. 651

Q.7 Select the correct alternative that when filled in the blanks in the same sequence will make the series logically complete.

_OLPM_NROS_TQUR_ SWT_

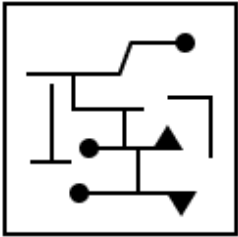
- Ans
- ☒ 1. JQNVZ
 - ☒ 2. KOPUX
 - ☒ 3. JONUZ
 - ☒ 4. KQPVX

Q.8 Select the option figure in which the given figure is embedded as its part (rotation is NOT allowed).

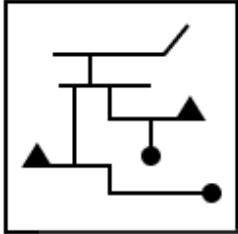


Ans

✓ 1.



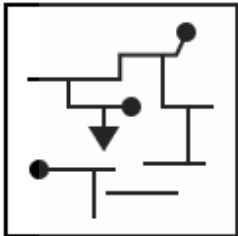
✗ 2.



✗ 3.



✗ 4.



Q.9 What should come in place of the question mark (?) in the given series based on the English alphabetical order?
ZZZ CCC FFF III ?

Ans

✗ 1. GGG

✗ 2. KKK

✗ 3. HHH

✓ 4. LLL

Q.10 In a certain code language,

'A + B' means 'A is the mother of B',
'A - B' means 'A is the brother of B',
'A × B' means 'A is the wife of B' and
'A ÷ B' means 'A is the father of B'.

Based on the above, how is Q related to T if 'P + Q - R × S ÷ T'?

Ans

✗ 1. Daughter

✓ 2. Mother's brother

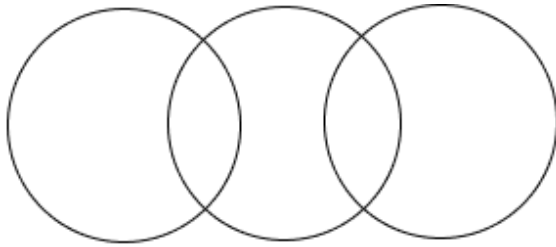
✗ 3. Brother's wife

✗ 4. Wife's father

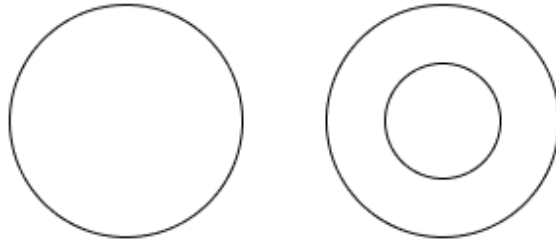
Q.11 Select the Venn diagram that best illustrates the relationship between the following classes.
Tree, Trouser, Phone

Ans

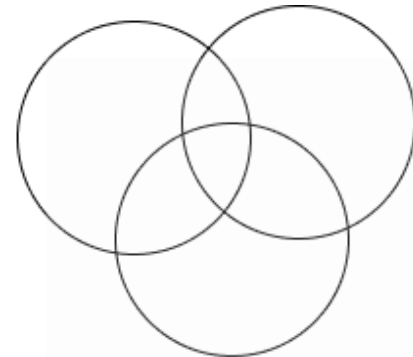
✗ 1.




✗ 2.



✗ 3.



✓ 4.



Q.12 Eight people are sitting in two parallel rows containing 4 people each in such a way that there is equal distance between adjacent persons.
In row 1 – L, M, N and O are seated and all of them are facing south.
In row 2 – P, Q, R and S are seated and all of them are facing north.
Thus, each person faces another person from the other row. M sits third to the right of N. The one facing Q is an immediate neighbour of N. The one facing O is an immediate neighbour of Q. The one facing M is an immediate neighbour of R. S sits at some place to the left of P.
Who among the following faces R?

Ans

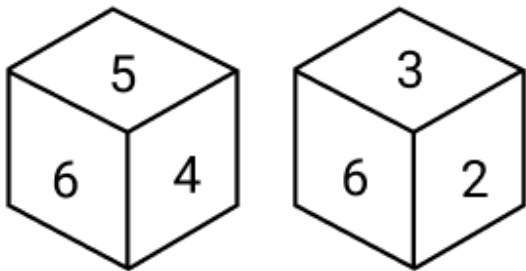
✗ 1. M

✗ 2. L

✗ 3. N

✓ 4. O

Q.13 Two different positions of the same dice are given below. Which is the number on the face opposite to the face containing 1?



- Ans
- ☐ 1. 3
 - ☒ 2. 6
 - ☐ 3. 4
 - ☐ 4. 5

Q.14 The position(s) of how many letters will remain unchanged if each of the letters in the word ICEBOATS is arranged in the English alphabetical order?

- Ans
- ☐ 1. Two
 - ☐ 2. One
 - ☐ 3. Three
 - ☒ 4. Zero

Q.15 What will come in the place of the question mark '?' in the following equation, if '+' and 'x' are interchanged and '-' and '÷' are interchanged?

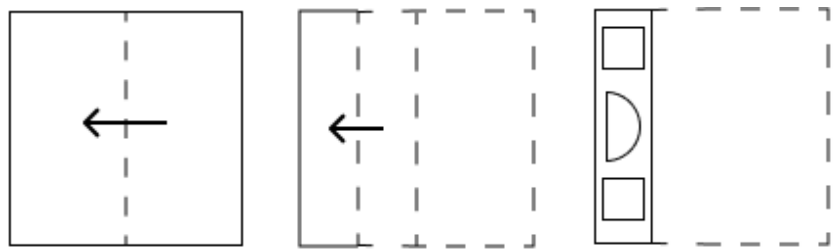
$47 - 5 \div 2 + 72 \times 6 = ?$

- Ans
- ☐ 1. 48
 - ☐ 2. 46
 - ☒ 3. 45
 - ☐ 4. 47

Q.16 In a coded language 'CARE' is coded as '5132' and 'RATE' is coded as '2154'. What is the code for T in the same code language?

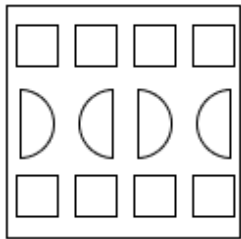
- Ans
- ☐ 1. 1
 - ☐ 2. 2
 - ☐ 3. 3
 - ☒ 4. 4

Q.17 A paper is folded and cut as shown below. How will it appear when unfolded?

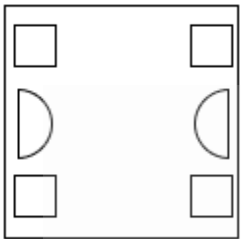


Ans

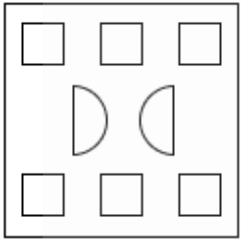
✓ 1.



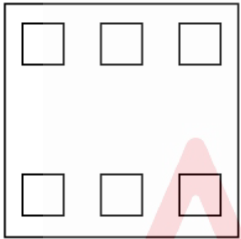
✗ 2.



✗ 3.



✗ 4.



Q.18 QIWC is related to OGTZ in a certain way based on the English alphabetical order. In the same way, GONY is related to EMKV. To which of the given options is FPJA related, following the same logic?

Ans

✗ 1. DNIY

✗ 2. CLHZ

✗ 3. EMHY

✓ 4. DNGX

Q.19 In a certain code language, 'help your friends' is coded as 'ap hg nk' and 'he needs help' is coded as 'sr ml ap'. How is 'help' coded in the given language?

Ans

✗ 1. nk

✗ 2. hg

✗ 3. sr

✓ 4. ap

Q.20 What should come in place of the question mark (?) in the given series?

809 810 812 815 819 ?

- Ans
1. 822

2. 821

3. 823

4. 824

Section : Part-B-General Knowledge and General awareness

Q.1 What is one primary objective of disinvestment in public sector enterprises?

- Ans
1. To reduce the efficiency of public enterprises

2. To eliminate private sector participation

3. To generate revenue for the government

4. To increase government control over industries

Q.2 When was the Major Dhyan Chand Khel Ratna Award won by Karnam Malleswari?

- Ans
1. 1994-95

2. 1992-93

3. 1993-94

4. 1991-92

Q.3 Who among the following acts as the chairman of the Planning Commission of the state?

- Ans
1. Governor

2. Chief Secretary

3. Finance Minister

4. Chief Minister

Q.4 In which year did the New India Literacy Programme begin?

- Ans
1. 2021-22

2. 2019-20

3. 2020-21

4. 2022-23

Q.5 The tribal dance, Kunbi, is predominantly performed in the Indian state of _____.

- Ans
1. Odisha

2. Uttarakhand

3. Sikkim

4. Goa

Q.6 In 1828, Friedrich Wöhler published a paper describing the formation of urea by combining which acid and ammonium in vitro?

- Ans
1. cyanic acid

2. hydroiodic acid

3. valeric acid

4. perchloric acid

Q.7 Who among the following was selected as the new Director General of the International Solar Alliance (ISA) during the seventh session, held in New Delhi in November 2024?

- Ans

☐ 1. Ajay Khanna

☐ 2. Ashish Mathur

☐ 3. Ajay Mathur

☒ 4. Ashish Khanna

Q.8 Who among the following is India's first transgender Bharatanatyam dancer and the first transgender woman to receive the Padma Shri in 2019 who was also a recipient of honorary doctorate for her contribution to the field of Bharatanatyam?

- Ans

☐ 1. Ivanka Das

☐ 2. Khushi Shaikh

☐ 3. Laxmi Narayan Tripathi

☒ 4. Narthaki Nataraj

Q.9 Which industry is considered a 'service industry'?

- Ans

☐ 1. Construction industry

☐ 2. Textile industry

☐ 3. Iron and steel industry

☒ 4. Tourism industry

Q.10 Emani Sankara Sastry was one of the first Carnatic maestros to use a contact microphone to harness the full potential of which musical instrument?

- Ans

☐ 1. Mandolin

☐ 2. Sarangi

☐ 3. Sarod

☒ 4. Veena

Q.11 In which year did the 86th Constitutional Amendment add the 11th Fundamental Duty in the Constitution?

- Ans

☐ 1. 1976

☒ 2. 2002

☐ 3. 1985

☐ 4. 2004

Q.12 Which of the following neighbouring countries of India has a state religion as Islam?

- Ans

☐ 1. Sri Lanka

☐ 2. Myanmar

☒ 3. Pakistan

☐ 4. Nepal

Q.13 According to a Buddhist text, how many oligarchic republics or kingdoms, called Mahajanapadas, ruled ancient India during the 6th to 4th centuries BCE?

- Ans

☐ 1. 11

☐ 2. 21

☒ 3. 16

☐ 4. 8

Q.14 A new cricket ball shall weigh not less than 155.9 g, nor more than _____ g, for standard conditions.

- Ans
- ☐ 1. 164
 - ☐ 2. 161
 - ☐ 3. 162
 - ☒ 4. 163

Q.15 In which of the following places are Reh and Boori Boot predominantly celebrated?

- Ans
- ☒ 1. Arunachal Pradesh
 - ☐ 2. Gujarat
 - ☐ 3. Himachal Pradesh
 - ☐ 4. Assam

Q.16 The Nile River, located in _____, has long been recognised as the world's longest river extending 6,695 km.

- Ans
- ☐ 1. South America
 - ☒ 2. North-Eastern Africa
 - ☐ 3. Northern Asia
 - ☐ 4. Western Europe

Q.17 Who led the Aligarh Movement to modernise education for Muslims in India?

- Ans
- ☒ 1. Syed Ahmed Khan
 - ☐ 2. Shaukat Ali
 - ☐ 3. Maulana Abul Kalam Azad
 - ☐ 4. Muhammad Ali Jinnah

Q.18 Dr. PC Mahalanobis is also known as _____.

- Ans
- ☐ 1. Founder of RBI
 - ☐ 2. Father of Green Revolution
 - ☒ 3. Father of Indian Statistics
 - ☐ 4. Father of New Economic Policy

Q.19 The temperature at which an oil starts to burn, leading to a burnt flavour in the foods being prepared is called:

- Ans
- ☒ 1. smoke point
 - ☐ 2. boiling point
 - ☐ 3. critical temperature
 - ☐ 4. ignition temperature

Q.20 Who among the following has been appointed as India's new Ambassador to the United States of America in July 2024?

- Ans
- ☒ 1. Vinay Mohan Kwatra
 - ☐ 2. Nancy J Powell
 - ☐ 3. Binay Ranjan Sen
 - ☐ 4. Richard R Verma

Q.1 If 4% of x = 108, then x is equal to:

- Ans

✓

1. 2700

✗

2. 5500

✗

3. 5400

✗

4. 2800

Q.2 A soap company produces two kinds of soaps having weight 500 gm and 650 gm, respectively. If 200 soaps of the first kind and 300 soaps of second the kind were produced, then what is the weighted average weight (in gm) of the soaps?

- Ans

✗

1. 620

✓

2. 590

✗

3. 610

✗

4. 600

Q.3 LCM and HCF of two numbers are 140 and 5 respectively. If one of the numbers is 35, then find the other number.

- Ans

✗

1. 23

✗

2. 19

✗

3. 22

✓

4. 20

Q.4 Find the value of $\left[(29 \times 13) \times \left\{ 3 \div 3 \times \frac{(18 - 14)}{4} \right\} \right]$

- Ans

✗

1. 380

✓

2. 377

✗

3. 364

✗

4. 391

Q.5 Evaluate: $16 + 12 \div 3 - 3 \times 3$

- Ans

✗

1. 14

✗

2. 10

✓

3. 11

✗

4. 13

Q.6 The value of $69 - 4 \times [4 + 3 \times \{ 20 - 5 (7 - 5) \times 2 \} \div 29]$ is:

- Ans

✗

1. 54

✗

2. 45

✗

3. 46

✓

4. 53

Q.7 Shivam has two grandsons Rupesh and Mandar. 12 year old Rupesh gets some money from Shivam’s wealth and 13 year old Mandar gets rest of the money. But Rupesh and Mandar will get money only when they turn 23 years old. Till then the money is in a bank getting interest at rate 8% compounded annually. When both turn 23, they receive the same amount. How much had Shivam given Mandar (in ₹) initially, if total money with Shivam was ₹24700?

- Ans

✗

1. 11875

✗

2. 13175

✗

3. 11625

✓

4. 12825

Q.8 A and B can do a piece of work in 18 days, B and C can do the same work in 32 days and A and C can do the same in 52 days. The time taken by A, B and C together to do the work is:

- Ans

✓

1.

18 $\frac{342}{397}$ days

✗

2.

17 $\frac{341}{397}$ days

✗

3.

15 $\frac{339}{397}$ days

✗

4.

16 $\frac{340}{397}$ days

Q.9 Nirmal invests a sum of ₹5400 and Rakesh invests a sum of ₹9400 at the same rate of simple interest per annum. If, at the end of 5 years, Rakesh gets ₹360 more interest than Nirmal, then find the rate of interest per annum (in percentage).

- Ans

✗ 1. 3.2

✗ 2. 3.8

✓ 3. 1.8

✗ 4. 2.2

Q.10 Find the area of a triangle, whose sides are 6 cm, 0.08 m and 4 cm.

- Ans

✗ 1. $5\sqrt{15}$ cm²

✗ 2. $4\sqrt{15}$ cm²

✓ 3. $3\sqrt{15}$ cm²

✗ 4. $6\sqrt{15}$ cm²

Q.11 Which of the following numbers will come in the place of x in the given equation?

0.3 : 4.8 :: 0.2 : x

- Ans

✗ 1. 3.8

✗ 2. 2.1

✓ 3. 3.2

✗ 4. 4.2

Q.12 Which scheme provides the highest discount among the options given?

- Ans

✗ 1. Two successive discounts of 8% each

✓ 2. Two successive discounts of 10% each

✗ 3. Two successive discounts of 5% each

✗ 4. Two successive discounts of 8% and 11%

Q.13 A train 268 m long is moving at a speed of 58 km/h. How much time will it take to cross a man coming from the opposite direction at a speed of 14 km/h?

- Ans

✗ 1. 12.8 seconds

✗ 2. 17.2 seconds

✗ 3. 15.5 seconds

✓ 4. 13.4 seconds

Q.14 The price (per litre) of petrol increases by 50%. By what percent should its consumption be reduced such that the expenditure on it increases by 41% only?

- Ans

✓ 1. 6%

✗ 2. 8%

✗ 3. 94%

✗ 4. 93%

Q.15 A man sold an article for ₹219, there by gaining 9.5%. The cost of the article (in ₹) was:

- Ans
- ☒ 1. 239
 - ☒ 2. 198
 - ☒ 3. 241
 - ☒ 4. 200

Q.16 Pravin has ₹1224 with him. He divided it amongst his sons Rishi and Shan and asked them to invest it at 4% rate of interest compounded annually. It was seen that Rishi and Shan got same amount after 15 and 16 years respectively. How much (in ₹) did Pravin give to Shan?

- Ans
- ☒ 1. 600
 - ☒ 2. 724
 - ☒ 3. 450
 - ☒ 4. 624

Q.17 The average of 21 numbers is 74. The average of the first 11 numbers is 72.8 and that of the last 11 numbers is 77.2. If the 10th number is five less than the 11th number and if 10th and 11th numbers are excluded, then what is the average of the remaining numbers? (correct to nearest integer)

- Ans
- ☒ 1. 71
 - ☒ 2. 70
 - ☒ 3. 73
 - ☒ 4. 72

Q.18 Baban sold 150 chairs and had a gain equal to the selling price of 90 chairs. What is his profit percentage?

- Ans
- ☒ 1. 145%
 - ☒ 2. 150%
 - ☒ 3. 155%
 - ☒ 4. 160%

Q.19 If x varies indirectly to y² and if x = 78, y = 11, then find the value of x when y = 2.2.

- Ans
- ☒ 1. 1950
 - ☒ 2. 1995
 - ☒ 3. 1880
 - ☒ 4. 1725

Q.20 Bhanu travels from City A to City B. If Bhanu drives his car at $\frac{3}{7}$ of his normal speed, then he reaches City B 28 minutes late. Find the time (in minutes) that Bhanu would have taken to travel from City A to City B if he drove at his normal speed.

- Ans
- ☒ 1. 18
 - ☒ 2. 11
 - ☒ 3. 21
 - ☒ 4. 19

Section : Part-D-English

Q.1 Fill in the blank with the most appropriate ANTONYM of the word given in brackets. This government was (feeble) _____ and corrupt.

- Ans
- ☒ 1. robust
 - ☒ 2. bungling
 - ☒ 3. spindly
 - ☒ 4. vulnerable

Q.2 Select the most appropriate ANTONYM of the given word.

Forward

- Ans
-  1. Mean

 2. Backward

 3. Leading

 4. Wise

Q.3 Select the option that correctly rectifies the underlined spelling error.

To achieve a continuos improvement in quality of results, hard work is needed.

- Ans
-  1. continuous

 2. continuose

 3. contenuous

 4. contineous

Q.4 Select the INCORRECTLY spelt word.

- Ans
-  1. Iminent


 2. Colloquial


 3. Exuberant


 4. Dinner


Q.5 Select the most appropriate ANTONYM of the given word.

Idle

- Ans
-  1. Brave


 2. Active


 3. Rude


 4. Lucky


Q.6 Select the most appropriate option that can substitute the underlined segment in the given sentence. If there is no need to substitute it, select 'No substitution required'

Over two hundred years ago, early in the eighteenth century, our ancestors had come down over this mountain valley to seek fame and fortune in the rich plains below.

- Ans
-  1. had been coming down onto


 2. No substitution required


 3. comes down into this


 4. came down from that


Q.7 The given sentence is divided into four segments. Select the option that has the segment with an adverbial usage error.

Elizabeth brightly / accepted the award / given by / the President.

- Ans
-  1. the President

 2. accepted the award

 3. given by

 4. Elizabeth brightly

Q.8 Identify the sentence with an INCORRECT use of adverb.

- Ans

✓ 1. She soon will finish the project.

✗ 2. They sent the invitation on Friday.

✗ 3. I'll see you at the conference tomorrow.

✗ 4. We visited the museum last weekend.

Q.9 Select the most appropriate option to fill in the blank.

The _____ nature of the proposal led to extensive discussions and debates among the committee members.

- Ans

✗ 1. transparent

✗ 2. agreeable

✗ 3. simplistic

✓ 4. contentious

Q.10 Your friend tells you to 'face the music' when you're hesitant to confess a mistake. What does your friend mean?

- Ans

✗ 1. Your friend wants you to dance.

✗ 2. Your friend wants you to listen to some music.

✓ 3. Your friend wants you to confront the consequences or accept responsibility for your actions.

✗ 4. Your friend wants you to avoid the situation.

Q.11 Complete the sentence with the suitable collocation.

The residents _____ now to just go about their lives.

- Ans

✗ 1. feel freed

✗ 2. has felt free

✓ 3. felt free

✗ 4. has been felt freed

Q.12 Select the most appropriate option that can substitute the underlined segment in the given sentence.

Alternative animal feeds can be source from byproducts, waste streams or novel crops; they are all designed to facilitate more sustainable agriculture.

- Ans

✓ 1. can be sourced from

✗ 2. can sourced from

✗ 3. can be sourced along

✗ 4. can be sourced near

Q.13 Select the most appropriate idiom that can substitute the underlined segment in the given sentence.

He has a knack for ignoring problems intentionally in his department, hoping they will just go away.

- Ans

✓ 1. turning a blind eye

✗ 2. turning point

✗ 3. turning a corner

✗ 4. turning a leaf

Q.14 Select the most appropriate ANTONYM of the given word.
Lethargic

- Ans

✗ 1. Sluggish

✗ 2. Dull

✓ 3. Dynamic

✗ 4. Sleepy

Q.15

Select the most appropriate **ANTONYM** of the given word.
Adversary

- Ans

✓

1. Ally

✗

2. Competitor

✗

3. Rival

✗

4. Enemy

Comprehension:

In the following passage, some words have been deleted. Read the passage carefully and select the most appropriate option to fill in each blank.

Transportation is a _____1_____ source of environmental pollution, mainly due to fossil fuel-powered vehicles emitting CO₂ into the atmosphere. However, the shift _____2_____ green cars offers hope for a cleaner future. Electric vehicles, or EVs, are another _____3_____ green technology innovation. Using electricity as their _____4_____ power source instead of gasoline or diesel, EVs produce zero tailpipe emissions, reducing the overall carbon emissions from transportation. With advancements in battery technology, EVs are becoming more accessible and _____5_____ for everyday use.

SubQuestion No : 16

Q.16

Select the most appropriate option to fill in blank No. 1.

- Ans

✗

1. different

✓

2. major

✗

3. rare

✗

4. cautious

Comprehension:

In the following passage, some words have been deleted. Read the passage carefully and select the most appropriate option to fill in each blank.

Transportation is a _____1_____ source of environmental pollution, mainly due to fossil fuel-powered vehicles emitting CO₂ into the atmosphere. However, the shift _____2_____ green cars offers hope for a cleaner future. Electric vehicles, or EVs, are another _____3_____ green technology innovation. Using electricity as their _____4_____ power source instead of gasoline or diesel, EVs produce zero tailpipe emissions, reducing the overall carbon emissions from transportation. With advancements in battery technology, EVs are becoming more accessible and _____5_____ for everyday use.

SubQuestion No : 17

Q.17

Select the most appropriate option to fill in blank No. 2.

- Ans

✗

1. across

✗

2. around

✗

3. through

✓

4. towards

Comprehension:

In the following passage, some words have been deleted. Read the passage carefully and select the most appropriate option to fill in each blank.

Transportation is a _____1_____ source of environmental pollution, mainly due to fossil fuel-powered vehicles emitting CO₂ into the atmosphere. However, the shift _____2_____ green cars offers hope for a cleaner future. Electric vehicles, or EVs, are another _____3_____ green technology innovation. Using electricity as their _____4_____ power source instead of gasoline or diesel, EVs produce zero tailpipe emissions, reducing the overall carbon emissions from transportation. With advancements in battery technology, EVs are becoming more accessible and _____5_____ for everyday use.

SubQuestion No : 18

Q.18

Select the most appropriate option to fill in blank No. 3.

- Ans

✗

1. sober

✓

2. remarkable

✗

3. fancy

✗

4. elevated

Comprehension:

In the following passage, some words have been deleted. Read the passage carefully and select the most appropriate option to fill in each blank.

Transportation is a _____1_____ source of environmental pollution, mainly due to fossil fuel-powered vehicles emitting CO₂ into the atmosphere. However, the shift _____2_____ green cars offers hope for a cleaner future. Electric vehicles, or EVs, are another _____3_____ green technology innovation. Using electricity as their _____4_____ power source instead of gasoline or diesel, EVs produce zero tailpipe emissions, reducing the overall carbon emissions from transportation. With advancements in battery technology, EVs are becoming more accessible and _____5_____ for everyday use.

SubQuestion No : 19

Q.19 Select the most appropriate option to fill in blank No. 4.

- Ans

✖

1. neutral

✔

2. primary

✖

3. hard

✖

4. internal

Comprehension:

In the following passage, some words have been deleted. Read the passage carefully and select the most appropriate option to fill in each blank.

Transportation is a _____1_____ source of environmental pollution, mainly due to fossil fuel-powered vehicles emitting CO₂ into the atmosphere. However, the shift _____2_____ green cars offers hope for a cleaner future. Electric vehicles, or EVs, are another _____3_____ green technology innovation. Using electricity as their _____4_____ power source instead of gasoline or diesel, EVs produce zero tailpipe emissions, reducing the overall carbon emissions from transportation. With advancements in battery technology, EVs are becoming more accessible and _____5_____ for everyday use.

SubQuestion No : 20

Q.20 Select the most appropriate option to fill in blank No. 5.

- Ans

✖

1. harmless

✖

2. competent

✖

3. neutral

✔

4. practical

Section : Part-D-Hindi

Q.1 निम्नलिखित विकल्पों में से ‘घृणा’ शब्द के लिए किस एक वाक्य में उचित विलोम का प्रयोग हुआ है।

- Ans

✖

1. सभी को संकट के समय मुकेश का सहयोग करना चाहिए।

✔

2. उसके प्रकृति प्रेम को सब जानते हैं।

✖

3. वह नफरत के योग्य है।

✖

4. मनीषा को आज सिनेमा देखने जाना है।

Q.2 दिए गए वाक्य के किस अंश में त्रुटि है चयन करें—
निरपराधी को दण्ड दिया जाना वास्तव में क़ानून का मज़ाक है।

- Ans

✖

1. वास्तव में क़ानून

✖

2. दण्ड दिया जाना

✔

3. निरपराधी को

✖

4. का मज़ाक है।

Q.3 निम्नलिखित वाक्य को ध्यानपूर्वक पढ़ें और क्रिया संबंधी त्रुटि की पहचान कर शुद्ध वाक्य का चयन करें।
वह उसको पुस्तक खो रहा है।

- Ans

✖

1. वह उसको पुस्तक ला रहा है।

✖

2. वह उसको पुस्तक जा रहा है।

✖

3. वह उसको पुस्तक चल रहा है।

✔

4. वह उसको पुस्तक दे रहा है।

Q.4 मुहावरे और उसके अर्थ के लिए सही विकल्प चुनें।
उंगली उठाना

- Ans
- ✓ 1. दोष लगाना
 - ✗ 2. दोस लगाना
 - ✗ 3. इशारा करना
 - ✗ 4. उँगली ऊपर करना

Q.5 निम्नलिखित वाक्यांश के लिए एक सार्थक शब्द चुनिए -
जहां से गंगा का उद्गम होता है

- Ans
- ✓ 1. गंगोत्री
 - ✗ 2. यमुनोत्री
 - ✗ 3. अग्निहोत्री
 - ✗ 4. भागीरथी

Q.6 निम्नलिखित वाक्य के किस खंड में अशुद्धि है?

विश्वविद्यालय के चार लड़का पकड़े गए।

- Ans
- ✗ 1. पकड़े
 - ✓ 2. लड़का
 - ✗ 3. विश्वविद्यालय
 - ✗ 4. चार

Q.7 'रमेश अपनी _____ से स्नेह करता है।' रिक्त स्थान की पूर्ति के लिए तत्सम शब्द होगा -

- Ans
- ✗ 1. बहन
 - ✓ 2. भगिनी
 - ✗ 3. बुभुक्षा
 - ✗ 4. पोथी

Q.8 शब्द या वाक्यखण्ड बदलें और उत्तर के रूप में सही विकल्प चुनें।
मैं आपकी श्रद्धा करता हूँ

- Ans
- ✗ 1. मैं आपकी बहुत श्रद्धा करता हूँ।
 - ✗ 2. मैं आप पर श्रद्धा करता हूँ।
 - ✓ 3. मैं आप पर श्रद्धा रखता हूँ।
 - ✗ 4. मैं आपकी ही श्रद्धा करता हूँ।

Q.9 निम्नलिखित विकल्पों में से 'मर्त्य' शब्द के लिए किस एक वाक्य में उचित विलोम का प्रयोग हुआ है?

- Ans
- ✗ 1. पाँच तत्वों में एक महत्वपूर्ण तत्व अग्नि भी है।
 - ✓ 2. महात्मा गाँधी अपने कार्यों के लिए अमर हैं।
 - ✗ 3. जीवन में जो प्रकाशित करे, वही महान है।
 - ✗ 4. जीवों पर दया करो।

Q.10 निम्न में से 'पड़ोसी' का पर्यायवाची शब्द है-

- Ans
- ✗ 1. प्रतिलिपि
 - ✓ 2. प्रतिवेशी
 - ✗ 3. प्रतिहारी
 - ✗ 4. प्रतिमुखी

Q.11

दिए गए वाक्यों के रेखांकित शब्दों के आधार पर संज्ञा की दृष्टि से अशुद्ध वाक्य की पहचान करें --

Ans

☒ 1. मेरा दिल घबरा रहा है न जाने क्या होगा?
☒ 2. माँ की ममता से बढ़कर कोई और प्रेम हो ही नहीं सकता।
☒ 3. दिवाली मेले के लिए बाज़ारों में सुंदर सजावट की गई है।
☒ 4. अकरम अच्छा धावक है उसे दौड़ में भाग लेना चाहिए।

Q.12

निम्नलिखित वाक्यांश हेतु सार्थक शब्द की पहचान करें।
जिसके विषय में कोई ज्ञान नहीं हो

Ans

☒ 1. अज्ञान
☒ 2. अज्ञानी
☒ 3. अज्ञात
☒ 4. ज्ञानी

Q.13

दिए गए शब्द का उचित विलोम शब्द चुनिए-

सगुण

Ans

☒ 1. निर्गुण
☒ 2. अगुन
☒ 3. विगुण
☒ 4. कगुन

Q.14

'कल मेरे _____ ने विद्यालय में भाषण दिया।'
रिक्त स्थान की पूर्ति विदेशज शब्द द्वारा कीजिए

Ans

☒ 1. अध्यापक
☒ 2. शिक्षक
☒ 3. मास्टर
☒ 4. गुरुवर

Q.15

'मैं घर की सफाई करूँगा और तब स्नान करूँगा।' निम्नलिखित विकल्पों में से इस वाक्य के लिए कौन सा एक उचित सरल वाक्य होगा?

Ans

☒ 1. सफाई करने के बाद स्नान करूँगा।
☒ 2. सफाई कर मैं घर की स्नान करूँगा।
☒ 3. घर की सफाई कर पहले मैं स्नान करूँगा।
☒ 4. मैं घर की सफाई कर स्नान करूँगा।

Comprehension:

गद्यांश के आधार पर प्रश्न का उत्तर दें।
 हम लगातार प्रकृति का दोहन करते रहे। स्थिति को इस कदर बद से _____ (16) _____ बना दिया कि धरती की आबोहवा जीने लायक नहीं रही। प्रकृति से छेड़छाड़ का ही नतीजा है बढ़ती प्राकृतिक _____ (17) _____। एक वर्ष में _____ (18) _____ पाँच सौ प्राकृतिक आपदाओं को हमें झेलना पड़ता है। शताब्दी के अंत, तक इस बात की _____ (19) _____ है कि तापमान ढाई से पाँच डिग्री सेल्सियस तक बढ़ जाएगा। इसके _____ (20) _____ परिणाम भुगतने होंगे।

SubQuestion No : 16

Q.16

उचित शब्द चुनकर गद्यांश में रिक्त स्थान (16) की पूर्ति करें-

Ans

☒ 1. भयंकर
☒ 2. बदतर
☒ 3. कठिनतम
☒ 4. जटिल

Comprehension:

गद्यांश के आधार पर प्रश्न का उत्तर दें।

हम लगातार प्रकृति का दोहन करते रहे। स्थिति को इस कदर बद से _____ (16) _____ बना दिया कि धरती की आबोहवा जीने लायक नहीं रही। प्रकृति से छेड़छाड़ का ही नतीजा है बढ़ती प्राकृतिक _____ (17) _____। एक वर्ष में _____ (18) _____ पाँच सौ प्राकृतिक आपदाओं को हमें झेलना पड़ता है। शताब्दी के अंत, तक इस बात की _____ (19) _____ है कि तापमान ढाई से पाँच डिग्री सेल्सियस तक बढ़ जाएगा। इसके _____ (20) _____ परिणाम भुगतने होंगे।

SubQuestion No : 17

Q.17 उचित शब्द चुनकर गद्यांश में रिक्त स्थान (17) की पूर्ति करें-

- Ans**
- ☒ 1. विभीषिकाएँ
 - ☒ 2. आपदाएँ
 - ☒ 3. परेशानियाँ
 - ☒ 4. समस्याएँ

Comprehension:

गद्यांश के आधार पर प्रश्न का उत्तर दें।

हम लगातार प्रकृति का दोहन करते रहे। स्थिति को इस कदर बद से _____ (16) _____ बना दिया कि धरती की आबोहवा जीने लायक नहीं रही। प्रकृति से छेड़छाड़ का ही नतीजा है बढ़ती प्राकृतिक _____ (17) _____। एक वर्ष में _____ (18) _____ पाँच सौ प्राकृतिक आपदाओं को हमें झेलना पड़ता है। शताब्दी के अंत, तक इस बात की _____ (19) _____ है कि तापमान ढाई से पाँच डिग्री सेल्सियस तक बढ़ जाएगा। इसके _____ (20) _____ परिणाम भुगतने होंगे।

SubQuestion No : 18

Q.18 उचित शब्द चुनकर गद्यांश में रिक्त स्थान (18) की पूर्ति करें-

- Ans**
- ☒ 1. नतीजा
 - ☒ 2. कुछ
 - ☒ 3. कल
 - ☒ 4. औसतन

Comprehension:

गद्यांश के आधार पर प्रश्न का उत्तर दें।

हम लगातार प्रकृति का दोहन करते रहे। स्थिति को इस कदर बद से _____ (16) _____ बना दिया कि धरती की आबोहवा जीने लायक नहीं रही। प्रकृति से छेड़छाड़ का ही नतीजा है बढ़ती प्राकृतिक _____ (17) _____। एक वर्ष में _____ (18) _____ पाँच सौ प्राकृतिक आपदाओं को हमें झेलना पड़ता है। शताब्दी के अंत, तक इस बात की _____ (19) _____ है कि तापमान ढाई से पाँच डिग्री सेल्सियस तक बढ़ जाएगा। इसके _____ (20) _____ परिणाम भुगतने होंगे।

SubQuestion No : 19

Q.19 उचित शब्द चुनकर गद्यांश में रिक्त स्थान (19) की पूर्ति करें-

- Ans**
- ☒ 1. संभावना
 - ☒ 2. आशा
 - ☒ 3. गुंजाइश
 - ☒ 4. पूर्वानुमान

Comprehension:

गद्यांश के आधार पर प्रश्न का उत्तर दें।

हम लगातार प्रकृति का दोहन करते रहे। स्थिति को इस कदर बद से _____ (16) _____ बना दिया कि धरती की आबोहवा जीने लायक नहीं रही। प्रकृति से छेड़छाड़ का ही नतीजा है बढ़ती प्राकृतिक _____ (17) _____। एक वर्ष में _____ (18) _____ पाँच सौ प्राकृतिक आपदाओं को हमें झेलना पड़ता है। शताब्दी के अंत, तक इस बात की _____ (19) _____ है कि तापमान ढाई से पाँच डिग्री सेल्सियस तक बढ़ जाएगा। इसके _____ (20) _____ परिणाम भुगतने होंगे।

SubQuestion No : 20

Q.20 उचित शब्द चुनकर गद्यांश में रिक्त स्थान (20) की पूर्ति करें-

- Ans**
- ☒ 1. गम्भीर
 - ☒ 2. व्यापक
 - ☒ 3. अधिकतर
 - ☒ 4. अनेक