

Constable GD in CAPFs and SSF Rifleman GD in AR and Sepoy in NCB Examination 2025

Exam Date	17/02/2025
Exam Time	9:00 AM - 10:00 AM
Subject	Constable GD Examination 2025

Section : Part-A-General Intelligence and Reasoning

Q.1 In a certain code language,

'A + B' means 'A is the mother of B',
'A – B' means 'A is the brother of B',
'A × B' means 'A is the wife of B' and
'A ÷ B' means 'A is the father of B'.

Based on the above, how is D related to F if 'B + C × D – E ÷ F'?

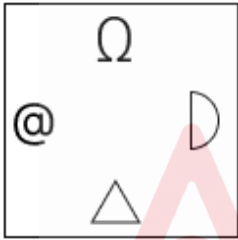
- Ans
- ✗ 1. Wife's father
 - ✗ 2. Brother's brother
 - ✓ 3. Father's brother
 - ✗ 4. Mother's husband

Q.2 Identify the figure given in the options, which when put in place of the question mark (?) will logically complete the series.

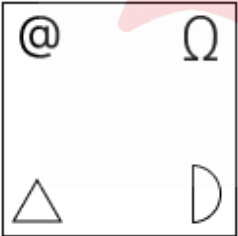
--	--	--	--	--

Ans

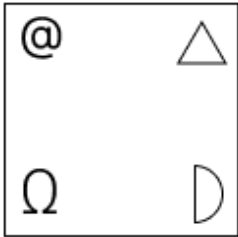
✓ 1.



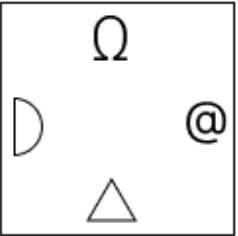
✗ 2.



✗ 3.



✗ 4.



Adda247

Test Prime

ALL EXAMS, ONE SUBSCRIPTION



1,00,000+
Mock Tests



**Personalised
Report Card**



**Unlimited
Re-Attempt**



600+
Exam Covered



25,000+ Previous
Year Papers



500%
Refund

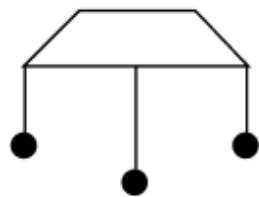


ATTEMPT FREE MOCK NOW

Q.3 Based on the English alphabetical order, three of the following four letter-clusters are alike in a certain way and thus form a group. Which letter-cluster DOES NOT belong to that group?
(Note: The odd one out is not based on the number of consonants/vowels or their position in the letter-cluster.)

- Ans
- ✗ 1. JKP
 - ✗ 2. FGL
 - ✗ 3. RSX
 - ✓ 4. MRZ

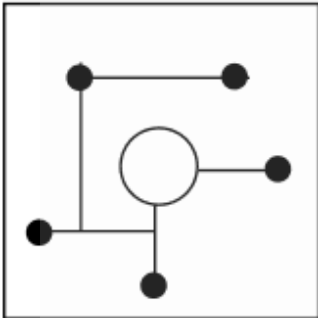
Q.4 Select the option in which the given figure (X) is embedded (rotation is NOT allowed).



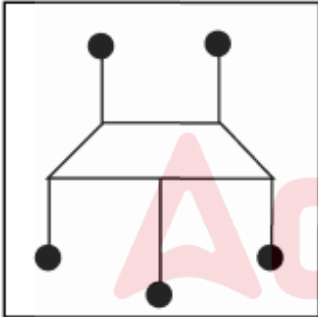
(X)

Ans

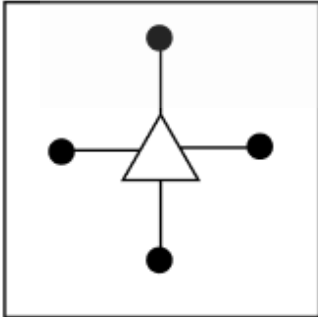
✗ 1.



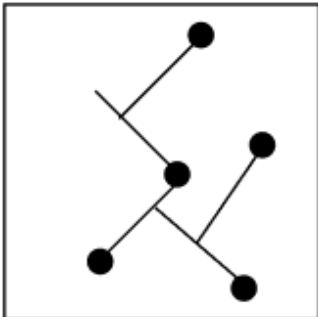
✓ 2.



✗ 3.



✗ 4.

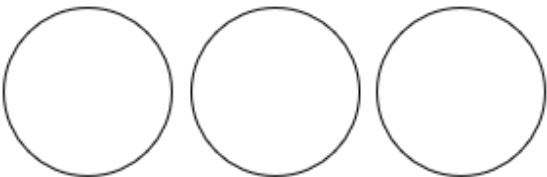


Q.5 Select the Venn diagram that best illustrates the relationship between the following classes.


Clothes, Shoes, Black

Ans

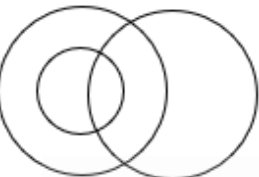
✗ 1.



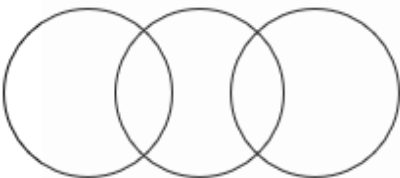
✗ 2.



✗ 3.



✓ 4.



Q.6 Seven people, G, H, I, J, K, L and M, are sitting in a row, facing north (but not necessarily in the same order) . Only two people sit to the left of I. Only three people sit between I and K. L sits second to the right of I. Only two people sit between L and G. M sits at some place to the right of H but at some place to the left of J. How many people sit to the right of M?

Ans

✗ 1. Four

✗ 2. Two

✓ 3. Three

✗ 4. One

Q.7 In a certain code language, 'HXCT' is coded as '55' and 'LAMU' is coded as '47'. What is the code for 'ZFGD' in the given code language?

Ans

✗ 1. 56

✗ 2. 48

✗ 3. 53

✓ 4. 43

Q.8 What will come in place of '?' in the following equation , if '+' and '÷' are interchanged and '-' and '×' are interchanged?

$$112 + 8 \times 2 - 13 \div 21 = ?$$

Ans

✗ 1. 5

✓ 2. 9

✗ 3. 6

✗ 4. 11

Q.9 What should come in place of the question mark (?) in the given series?

$$800\ 789\ 767\ 734\ 690\ 635\ ?$$

Ans

✓ 1. 569

✗ 2. 530

✗ 3. 400

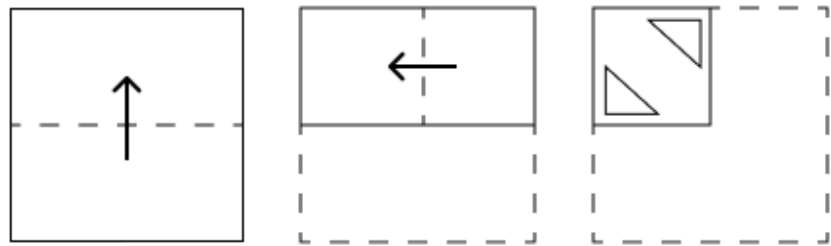
✗ 4. 250

Q.10 What should come in place of the question mark (?) in the given series based on the English alphabetical order?

Y, N, X, L, W, J, V, H, ?, F

- Ans
- ✗ 1. T
 - ✗ 2. I
 - ✓ 3. U
 - ✗ 4. J

Q.11 The sequence of folding a piece of paper and the manner in which the folded paper is cut is shown in the following figures. How would this paper look when unfolded?



- Ans
- ✓ 1.
 - ✗ 2.
 - ✗ 3.
 - ✗ 4.

Q.12 What should come in place of the question mark (?) in the given series?

645 650 656 663 671 ?

- Ans
- ✗ 1. 676
 - ✗ 2. 677
 - ✓ 3. 680
 - ✗ 4. 679

Q.13 MISC is related to OFUZ in a certain way based on the English alphabetical order. In the same way, ZDEN is related to BAGK. To which of the given options is PVAT related, following the same logic?

- Ans
- ☐ 1. TQBO
 - ☒ 2. RSCQ
 - ☐ 3. STDP
 - ☐ 4. STBP

Q.14 E, F, G, H, K, L and N are sitting around a circular table facing the centre (but not necessarily in the same order) .
N sits to the immediate right of E. Only three people sit between N and H when counted from the left of N. Only three people sit between E and K. F sits to the immediate right of G.
How many people sit between E and G when counted from the right of G?

- Ans
- ☐ 1. Three
 - ☐ 2. Four
 - ☒ 3. One
 - ☐ 4. Two

Q.15 Select the combination of letters that when sequentially placed in the blanks of the given series, will logically complete the series.

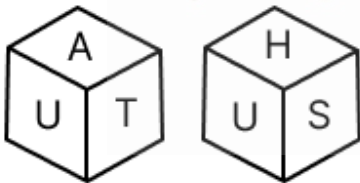
_QMRN_OTPU_VRWS_ TYU_

- Ans
- ☒ 1. LSQXZ
 - ☐ 2. KSNXW
 - ☐ 3. LRQUZ
 - ☐ 4. KRNUW

Q.16 In a certain code language, ‘plant more trees’ is coded as ‘uf gk ro’ and ‘trees give oxygen’ is coded as ‘lm xs gk’. How is ‘trees’ coded in the given language?

- Ans
- ☐ 1. ro
 - ☐ 2. uf
 - ☐ 3. xs
 - ☒ 4. gk

Q.17 A dice has its faces marked by letters U, J, T, H, A and S. Two positions of the same dice are given below. Which face is opposite to face J?



- Ans
- ☐ 1. S
 - ☐ 2. A
 - ☒ 3. U
 - ☐ 4. T

Q.18 The position(s) of how many letters will remain unchanged if each of the letters in the word FUNFAIRS is arranged in reverse English alphabetical order?

- Ans
- ☒ 1. Zero
 - ☐ 2. Three
 - ☐ 3. One
 - ☐ 4. Two

Q.19 In a certain code language, GTSU is written as TGHF and KJIE is written as PQRV. How will ALMO be written in the given language?

- Ans**
- ☒ 1. ZYEL
 - ☒ 2. ZLNO
 - ☒ 3. ZONL
 - ☒ 4. LOGL

Q.20 Read the given statements and conclusions carefully. Assuming that the information given in the statements is true, even if it appears to be at variance with commonly known facts, decide which of the given conclusions logically follow(s) from the statements.

Statements:
All vacuums are machines.
No vacuum is a game.
All games are toys.

Conclusions:
(I) No toy is a machine.
(II) Some toys are vacuums.

- Ans**
- ☒ 1. Only conclusion (II) follows
 - ☒ 2. Both conclusions (I) and (II) follow
 - ☒ 3. Only conclusion (I) follows
 - ☒ 4. Neither conclusion (I) nor (II) follows

Section : Part-B-General Knowledge and General awareness

Q.1 Which of the following rivers is NOT mentioned in Rigveda?

- Ans**
- ☒ 1. Krishna
 - ☒ 2. Yamuna
 - ☒ 3. Saraswati
 - ☒ 4. Sindhu

Q.2 Which was an ancient ocean that existed approximately 250 to 50 million years ago before the evolution of the Indian Ocean?

- Ans**
- ☒ 1. Tethys sea
 - ☒ 2. Ionian Sea
 - ☒ 3. Aegean Sea
 - ☒ 4. Aral Sea

Q.3 Who among the following authored the book 'Sarvajanic Satyadharma'?

- Ans**
- ☒ 1. Jyotiba Phule
 - ☒ 2. Swami Vivekananda
 - ☒ 3. Debendranath Tagore
 - ☒ 4. Mahatma Gandhi

Q.4 What was a unique feature of the Fifth Five Year Plan (1974-1979)?

- Ans**
- ☒ 1. It was the first plan to focus on the environment.
 - ☒ 2. It introduced economic liberalisation.
 - ☒ 3. Exclusive focus on the service sector
 - ☒ 4. Emphasis on 'Garibi Hatao' (Eradicate Poverty)

Q.5 Who is the female singer of the song 'London Thumagda' from the film Queen?

- Ans

 1. Lata Mageshkar

 2. Neha Kakkar

 3. Asha Bhosle

 4. Alka Yagnik

Q.6 According to the 74th Constitutional Amendment Act, which of the following institutions is responsible for regular and fair elections to the Municipalities?

- Ans

 1. District Election Commission

 2. State Election Commission

 3. Divisional Election Commission

 4. Election Commission of India

Q.7 In which year did Indian dancer, Sonal Mansingh receive the Padma Vibhushan, India's second highest civilian award?

- Ans

 1. 2003

 2. 2016

 3. 1996

 4. 2000

Q.8 Who is the 25th Chief Election Commissioner of India?

- Ans

 1. Sukumar Sen

 2. T Swaminathan

 3. N Gopalaswami

 4. Rajiv Kumar

Q.9 Who were the flag bearers in the opening ceremony of the Asian Games 2023?

- Ans

 1. Harmanpreet Singh and Annu Rani


 2. Neeraj Chopra and Lovlina Borgohain


 3. Bajrang Punia and PV Sindhu


 4. Harmanpreet Singh and Lovlina Borgohain


Q.10 The constant number of water molecules present in one formula of a single unit of salt is known as:

- Ans

 1. fixed water

 2. unmovable water

 3. crystallised aqua

 4. water of crystallisation

Q.11 In what reference was ‘Growth’ the goal of all the five-year plans?

- Ans

 1. Growth of country's capacity to produce goods and services


 2. Growth in foreign investment in the country


 3. Growth in the import of goods and services in the country


 4. Growth of population


Q.12 The New Year as per the Assamese calendar coincides with the beginning of the harvest season, which is also known as _____ Bihu.

- Ans

 1. Bohag

 2. Chaitra

 3. Kaati

 4. Maagh

Q.13 Who is the chief minister of Delhi as of October 2024?


- Ans
-  1. Hemant Soren


 2. Atishi Marlena


 3. Sukhvinder Singh Sukhu


 4. Bhupendra Patel

Q.14 Magnesium hydroxide is a common ingredient of antacids and laxatives popularly known as:

- Ans
-  1. fused magnesia

 2. milk of magnesia

 3. magnesia alba

 4. caustic-calcined magnesia

Q.15 Which Article of the Indian Constitution stipulates that the State shall work to promote the educational and economic interests of Scheduled Castes and Scheduled Tribes?


- Ans
-  1. Article 49


 2. Article 45


 3. Article 48


 4. Article 46

Q.16 Aajeevika - National Rural Livelihoods Mission (NRLM) was launched by the Ministry of Rural Development (MoRD), Government of India in the year _____.

- Ans
-  1. 2013

 2. 2012

 3. 2011

 4. 2010

Q.17 As per Census 2011, which of the following southern states has the lowest literacy rate?

- Ans
-  1. Karnataka

 2. Andhra Pradesh

 3. Tamil Nadu

 4. Kerala

Q.18 In the monasteries of which state was the Sattriya dance form developed?

- Ans
-  1. West Bengal

 2. Arunachal Pradesh

 3. Assam

 4. Sikkim

Q.19 From where does the customer get the ability to buy goods and services?

- Ans
-  1. Advertisement

 2. Investment

 3. Taste and preference

 4. Income

Q.20 Bhakti Pradip Kulkarni is a famous _____ player?

- Ans
-  1. judo

 2. badminton

 3. chess

 4. cricket

Q.1 What time (in seconds) is required for a 238 m long train to cross a 702 m long tunnel, if the train travels at a speed of 36 km/h?

- Ans**
- ☒ 1. 94
 - ☐ 2. 90
 - ☐ 3. 100
 - ☐ 4. 104

Q.2 How many kilograms of sugar at ₹3.80 per kg should be mixed with 60 kgs of sugar at ₹4.60 per kg, so that by selling the mixture at ₹5 per kg, there may be gain of 25%?

- Ans**
- ☐ 1. 160 kg
 - ☒ 2. 180 kg
 - ☐ 3. 170 kg
 - ☐ 4. 190 kg

Q.3 To do a certain work, Q and R work on alternate days, with Q beginning the work on the first day. Q can finish the work alone in 56 days. If the work gets completed in 37.5 days, then R alone can finish half of the same work in:

- Ans**
- ☐ 1. 28 days
 - ☐ 2. 21 days
 - ☒ 3. 14 days
 - ☐ 4. 7 days

Q.4 The third proportional to 0.13 and 0.52 is:

- Ans**
- ☐ 1. 1.45
 - ☐ 2. 3.12
 - ☐ 3. 2.65
 - ☒ 4. 2.08

Q.5 Evaluate: $(-9) - (-60) \div (-12) + (-3) \times 8$

- Ans**
- ☒ 1. -38
 - ☐ 2. -37
 - ☐ 3. -41
 - ☐ 4. -40

Q.6 The simple interest on a principal amount (in ₹) is ₹486 for a period of 3 years at the rate of 8% per annum. The principal amount (in ₹) is:

- Ans**
- ☐ 1. 2015
 - ☐ 2. 2027
 - ☐ 3. 2029
 - ☒ 4. 2025

Q.7 The LCM of 18, 72, 184 and 144 is:

- Ans**
- ☐ 1. 3388
 - ☐ 2. 3351
 - ☒ 3. 3312
 - ☐ 4. 3220

Q.8 The population of a district is 340000, out of which 217000 are males. 11% of the population is literate. If 11% males are literate, then what percentage of females are literate?

- Ans**
- ☐ 1. 12%
 - ☐ 2. 14%
 - ☐ 3. 13%
 - ☒ 4. 11%

Q.9 Evaluate: $16 + 10 \div 5 - 3 \times 3$

- Ans**
- ☐ 1. 8
 - ☒ 2. 9
 - ☐ 3. 11
 - ☐ 4. 12

Q.10 The average weight of Chetan, Vipul and Mohan is 46 kg. If the average weight of Chetan and Vipul be 40 kg and that of Vipul and Mohan be 44 kg, then the weight of Vipul (in kg) is:

- Ans**
- ☐ 1. 40
 - ☒ 2. 30
 - ☐ 3. 50
 - ☐ 4. 45

Q.11 When difference between compound and simple interest for three years is ₹122 at 5% interest per annum, the principal is ₹_____

- Ans**
- ☒ 1. 16000
 - ☐ 2. 15425
 - ☐ 3. 16420
 - ☐ 4. 17200

Q.12 The ice compartment in a refrigerator is 36 cm deep, 16 cm high and 12 cm wide. How many ice cubes will it hold, if each cube is 4 cm as its edge?

- Ans**
- ☐ 1. 216
 - ☐ 2. 54
 - ☒ 3. 108
 - ☐ 4. 27

Q.13 Find the value of $\left[(60 \div 5) \times \left\{ \frac{56}{4} + \frac{14}{3} \times (9 - 6) \right\} \right]$

- Ans**
- ☐ 1. 347
 - ☒ 2. 336
 - ☐ 3. 349
 - ☐ 4. 325

Q.14 There are three persons M,N And P. They are running in the same direction around a circular track of length 150 m. Their speeds are 20 m/sec,15 m/sec and 12 m/sec, respectively. If they start at same time and same point, then after what time do they meet for the first time?

- Ans**
- ☐ 1. 15 sec
 - ☐ 2. 16 sec
 - ☒ 3. 150 sec
 - ☐ 4. 240 sec

Q.15 Mohan sold 153 chairs and had a gain equal to the selling price of 68 chairs. What is his profit percentage?

- Ans
- ✓ 1. 80%
 - ✗ 2. 90%
 - ✗ 3. 85%
 - ✗ 4. 75%

Q.16 When difference between compound and simple interest for three years is ₹186 at 10% interest per annum, the principal is ₹_____

- Ans
- ✗ 1. 5425
 - ✗ 2. 6420
 - ✗ 3. 7200
 - ✓ 4. 6000

Q.17 A shopkeeper bought an article for ₹540. At what price (in ₹) should he sell the article to make 20% profit?

- Ans
- ✓ 1. 648
 - ✗ 2. 636
 - ✗ 3. 432
 - ✗ 4. 660

Q.18 A medicine has 60% substance S and 40% substance T. If the cost price of S is increased from ₹30 to ₹40 per unit and the cost price of T is decreased to ₹20 from ₹30 per unit, then the cost of the medicine will ____ by ____%.

- Ans
- ✗ 1. decrease; 6.67
 - ✗ 2. decrease; 3.33
 - ✗ 3. increase; 3.33
 - ✓ 4. increase; 6.67

Q.19 If 4% of $x = 60$, then x is equal to:

- Ans
- ✗ 1. 3000
 - ✗ 2. 1600
 - ✓ 3. 1500
 - ✗ 4. 3100

Q.20 A store offers two successive discounts of 12% and 18% on an item. What is the equivalent single discount that a customer would receive if these two discounts were applied together?

- Ans
- ✗ 1. 26.46%
 - ✓ 2. 27.84%
 - ✗ 3. 30%
 - ✗ 4. 28.64%

Section : Part-D-English

Q.1 Select the most appropriate option that can substitute the highlighted word segment in the given sentence. If the sentence is grammatically correct, select 'No correction'.

The book, which has all the details on parenting, missing.

- Ans
- ✗ 1. No correction
 - ✗ 2. had been missing
 - ✓ 3. is missing
 - ✗ 4. had missing

Q.2 Select the most appropriate synonym that can substitute the underlined word in the given sentence.

The brothers defended their sister every time.

- Ans

☐

1. invaded
- ☐

2. condemned
- ☐

3. united
- ☒

4. protected

Q.3 Select the correct spelling of the incorrectly spelt word in the given sentence.

The aroma of freshly brewed coffee was irressistible.

- Ans

☐

1. irrisitable
- ☐

2. irressistibal
- ☒

3. irresistible
- ☐

4. irrisistable

Q.4 Select the most appropriate option that can substitute the underlined segment in the given sentence.

The new technology proved to be quite efficient in streamlining daily tasks.

- Ans

☐

1. sojourning
- ☐

2. startling
- ☒

3. simplifying
- ☐

4. stripling

Q.5 Select the most appropriate ANTONYM of the given word.

Abundant

- Ans

☒

1. Sparse
- ☐

2. Plentiful
- ☐

3. Ample
- ☐

4. Copious

Q.6 Select the most appropriate option that can substitute the underlined words in the given sentence.

The software was developed in a team of experts and tested by users before its release.

- Ans

☐

1. The software was developed across
- ☐

2. The software was developed at
- ☒

3. The software was developed by
- ☐

4. The software was developed on

Q.7 Rectify the sentence by selecting the correctly spelt word from the options.

The speech was insipeed, leaving everyone restless and bored.

- Ans

☐

1. Insiepid
- ☐

2. Innsipid
- ☐


3. Insepid
- ☒


4. Insipid


Q.8 Select the most appropriate option to substitute the underlined segment in the given sentence.


The players were disappointed above the defeat of their team.

- Ans


1. by the defeat



2. over the defeat



3. around the defeat



4. in the defeat


Q.9 Select the sentence with an error in the adverb used.

- Ans


1. The software update was implemented so seamlessly that users barely noticed any changes.


2. The manager evaluated the proposals more critically than her colleagues.



3. The results were analysed careful to ensure accuracy.



4. The team worked incredibly hard to meet the tight deadline.


Q.10 Select the most appropriate idiom that can substitute the underlined segment in the given sentence.


Don't assume that everyone but you is happy. The grass is always redder on one side.

- Ans


1. sky is red in the evening


2. grass is always greener on the other side



3. plant is always greener on all sides


4. fruit is yellow on the other side


Q.11 The following sentence has been split into four segments. Identify the segment that contains a grammatical error.

(A) She quick finished her homework / (B) before dinner, eager to join her friends / (C) at the park for / (D) an exciting game of soccer.

- Ans


1. A


2. D


3. C


4. B

Q.12 Select the most appropriate option to fill in the blank.

She always looks on the _____ side of life, no matter how tough things get.

- Ans


1. bright


2. negative



3. dark


4. neutral

Q.13 Select the most appropriate ANTONYM of the underlined word.


The driver made an obscene gesture at the passenger.

- Ans


1. Decent


2. Hilarious


3. Improper


4. Mean

Q.14 Select the most appropriate ANTONYM of the given word.

Vigilant

- Ans
- ☒ 1. Awake
 - ☒ 2. Careless
 - ☒ 3. Choosy
 - ☒ 4. Mindful

Q.15 Select the word that best completes the sentence. Determine the collocation through the sentence.

He tends to _____ a lot of noise when he's working.

- Ans
- ☒ 1. have
 - ☒ 2. give
 - ☒ 3. get
 - ☒ 4. make

Comprehension:

In the following passage, some words have been deleted. Read the passage carefully and select the most appropriate option to fill in each blank.

For many healthcare workers, (1) _____ nurses, longer hours and shift work are the norm. Nurses are (2) _____ expected to work on public holidays, and may have to work for six or seven (3) _____ days before having a few days off, instead of the standard five days on, two days off. Also, many healthcare services, such as hospitals and aged care facilities, (4) _____ staffing seven days a week. It's imperative any restructured work arrangements are designed to _____ (5) _____ continuous, adequate staffing. Consequently, a direct transition from a five-day to a four-day work week might not be immediately logical or applicable.

SubQuestion No : 16

Q.16 Select the most appropriate option to fill in blank no. 1.

- Ans
- ☒ 1. ascetically
 - ☒ 2. equally
 - ☒ 3. especially
 - ☒ 4. fanatically

Comprehension:

In the following passage, some words have been deleted. Read the passage carefully and select the most appropriate option to fill in each blank.

For many healthcare workers, (1) _____ nurses, longer hours and shift work are the norm. Nurses are (2) _____ expected to work on public holidays, and may have to work for six or seven (3) _____ days before having a few days off, instead of the standard five days on, two days off. Also, many healthcare services, such as hospitals and aged care facilities, (4) _____ staffing seven days a week. It's imperative any restructured work arrangements are designed to _____ (5) _____ continuous, adequate staffing. Consequently, a direct transition from a five-day to a four-day work week might not be immediately logical or applicable.

SubQuestion No : 17

Q.17 Select the most appropriate option to fill in blank no. 2.

Ans

✓ 1.

often

✗ 2.

hardly

✗ 3.

rarely

✗ 4.

seldom

Comprehension:

In the following passage, some words have been deleted. Read the passage carefully and select the most appropriate option to fill in each blank.

For many healthcare workers, (1) _____ nurses, longer hours and shift work are the norm. Nurses are (2) _____ expected to work on public holidays, and may have to work for six or seven (3) _____ days before having a few days off, instead of the standard five days on, two days off. Also, many healthcare services, such as hospitals and aged care facilities, (4) _____ staffing seven days a week. It's imperative any restructured work arrangements are designed to _____ (5) _____ continuous, adequate staffing. Consequently, a direct transition from a five-day to a four-day work week might not be immediately logical or applicable.

SubQuestion No : 18

Q.18 Select the most appropriate option to fill in blank no. 3.

Ans

✗ 1.

consensus

✗ 2.

conjunctinal

✓ 3.

consecutive

✗ 4.

continent

Comprehension:

In the following passage, some words have been deleted. Read the passage carefully and select the most appropriate option to fill in each blank.

For many healthcare workers, (1) _____ nurses, longer hours and shift work are the norm. Nurses are (2) _____ expected to work on public holidays, and may have to work for six or seven (3) _____ days before having a few days off, instead of the standard five days on, two days off. Also, many healthcare services, such as hospitals and aged care facilities, (4) _____ staffing seven days a week. It's imperative any restructured work arrangements are designed to _____ (5) _____ continuous, adequate staffing. Consequently, a direct transition from a five-day to a four-day work week might not be immediately logical or applicable.

SubQuestion No : 19

Q.19 Select the most appropriate option to fill in blank no. 4.

Ans ☒ 1.
rectify

☒ 2.
pacify

☒ 3.
require

☒ 4.
specify

Comprehension:

In the following passage, some words have been deleted. Read the passage carefully and select the most appropriate option to fill in each blank.

For many healthcare workers, (1) _____ nurses, longer hours and shift work are the norm. Nurses are (2) _____ expected to work on public holidays, and may have to work for six or seven (3) _____ days before having a few days off, instead of the standard five days on, two days off. Also, many healthcare services, such as hospitals and aged care facilities, (4) _____ staffing seven days a week. It's imperative any restructured work arrangements are designed to _____ (5) _____ continuous, adequate staffing. Consequently, a direct transition from a five-day to a four-day work week might not be immediately logical or applicable.

SubQuestion No : 20

Q.20 Select the most appropriate option to fill in blank no. 5.

Ans ☒ 1.
treat

☒ 2.
animate

☒ 3.
scrutinise

☒ 4.
ensure

Section : Part-D-Hindi

Q.1 निम्नलिखित में से 'उल्लास' का विलोम शब्द है -

Ans ☒ 1. विषाद
☒ 2. प्रसन्नता
☒ 3. हर्ष
☒ 4. आनंद

Q.2 निम्नलिखित वाक्य को ध्यानपूर्वक पढ़ें और क्रिया संबंधी त्रुटि की पहचान कर शुद्ध वाक्य का चयन करें।
वह क्रिकेट खेल है।

- Ans
- ✓ 1. वह क्रिकेट खेलता है।
 - ✗ 2. वह क्रिकेट खेल हैं।
 - ✗ 3. वह वहाँ क्रिकेट खेल है।
 - ✗ 4. वह क्रिकेट खोता है।

Q.3 व्यक्ति को पहले स्वार्थ त्यागना चाहिए।

इस वाक्य में 'स्वार्थ' शब्द का कौन – सा विलोम होगा ?

- Ans
- ✗ 1. अर्थ
 - ✗ 2. निहितार्थ
 - ✓ 3. परार्थ
 - ✗ 4. सामर्थ्य

Q.4 'आपने यह इंतजाम कितने _____ के लिए किया है।' वाक्य के रिक्त स्थान के लिए उपयुक्त गैर-विदेशी शब्द का चुनाव कीजिए-

- Ans
- ✗ 1. हाकिमों
 - ✗ 2. रिश्तेदारों
 - ✗ 3. मेहमानों
 - ✓ 4. व्यापारियों

Q.5 निम्न वाक्य में रेखांकित पद को संशोधित कीजिए।
यदि उन्हें लकड़ी मिल जाएँ तो वे पोस्टर बनाएँगे।

- Ans
- ✗ 1. सीमेंट
 - ✓ 2. कागज
 - ✗ 3. पत्ते
 - ✗ 4. कलम

Q.6 निम्न वाक्य में वर्तनीगत त्रुटि पहचानिए।
लेखिका की यह किताब पुनरिक्षीत हो चुकी है।

- Ans
- ✗ 1. किताब
 - ✓ 2. पुनरिक्षीत
 - ✗ 3. लेखिका
 - ✗ 4. चुकी है

Q.7 मेरा मित्र बहुत कपटी है।

इसमें प्रयुक्त 'कपटी' शब्द का विलोम चयन कीजिए।

- Ans
- ✓ 1. निष्कपट
 - ✗ 2. अकपट
 - ✗ 3. निर्मल
 - ✗ 4. छल

Q.8 वाक्य में रेखांकित शब्द के स्थान पर सर्वोचित शब्द का चयन कीजिए।

इस कक्ष का निर्माण रोटरी क्लब की दया से हुआ है।

- Ans
- ✗ 1. इच्छा
 - ✗ 2. आकांक्षा
 - ✗ 3. कृपा
 - ✓ 4. सुजनता

Q.9 'काशी नरेश ने अपनी पुत्रियों के विवाह के लिए सवयंबर का आयोजन किया।' वाक्य में रेखांकित शब्द की शुद्ध वर्तनी है-

- Ans
- ✓ 1. स्वयंवर
 - ✗ 2. सुयमंवर
 - ✗ 3. स्वयंम्बर
 - ✗ 4. स्वयम्बर

Q.10 निम्नलिखित वाक्यांश को ध्यानपूर्वक पढ़ें और वाक्यांश हेतु सार्थक शब्द प्रस्तुत करें। जो परस्पर एक-दूसरे पर आश्रित हो।

- Ans
- ✓ 1. अन्योन्याश्रित
 - ✗ 2. अन्त्योश्रय
 - ✗ 3. आश्रय
 - ✗ 4. आश्रित

Q.11 निम्नलिखित में से 'मुख्य' का विलोम शब्द है -

- Ans
- ✓ 1. गौण
 - ✗ 2. प्रधान
 - ✗ 3. विशिष्ट
 - ✗ 4. खास

Q.12 प्रेरणार्थक क्रिया की दृष्टि से शुद्ध वाक्य है-

- Ans
- ✗ 1. रमेश इस किताब को पढ़ सकता है।
 - ✓ 2. ठेकेदार मज़दूर से ईंटें उठाता है।
 - ✗ 3. वह कल बनारस चला गया।
 - ✗ 4. मैं खाना खाता हूँ।

Q.13 निम्नलिखित वाक्यांश के लिए सार्थक शब्द चुनिए - जो कभी बूढ़ा न हो

- Ans
- ✗ 1. अगर
 - ✗ 2. अमर
 - ✓ 3. अजर
 - ✗ 4. मगर

Q.14 'रामु बाजार में अलग-थलग खड़ा था।' वाक्य में प्रयुक्त अलग-थलग किस प्रकार के शब्द युग्म के अंतर्गत आएंगे?

- Ans
- ✓ 1. सार्थक निरर्थक
 - ✗ 2. सार्थक-सार्थक
 - ✗ 3. पर्यायवाची शब्द
 - ✗ 4. शब्द विलोम

Q.15 'आग में घी डालना' मुहावरे का अर्थ है -

- Ans
- ✗ 1. समझौता कराना
 - ✗ 2. बीच - बचाव करना
 - ✓ 3. क्रोध बढ़ाना
 - ✗ 4. शांत करना

Comprehension:

निम्नलिखित गद्यांश को पढ़कर प्रश्नों के उत्तर दीजिए-

राष्ट्रभाषा से यह अभिप्राय है कि वह अंतरांतीय व्यापार और (41) _____ व्यवहार में सभी प्रांतों में रहनेवालों द्वारा बरती जाए और बदरीनाथ से रामेश्वरम् तक तथा अमृतसर से कटक तक सभी स्थानों में परस्पर बातचीत करने और (42) _____ में काम लाई जाए। राष्ट्रभाषा होने की अधिकाधिक योग्यता हिंदी में आनी और लानी चाहिए। आज के युग में जब वैज्ञानिक आविष्कार के कारण दुनिया से स्थान और समय की दूरी समाप्त होती जा रही है, कोई भी भाषा दूसरी भाषा के संपर्क से अपने को (43) _____ नहीं रख सकती। हिंदी का यह एक विशेष गुण है कि उसने हिंदुओं की भाषा होते हुए भी अरबी, फारसी, अंगरेजी इत्यादि के शब्दों को अछूत नहीं समझा। (44) _____ की नीति तो वह कदापि स्वीकार नहीं कर सकती और न विदेशी शब्दों को ही बाहर रखकर वह अपनी उन्नति कर सकती है। हिंदुस्तान में हिंदू, मुसलमान, ईसाई, सिख इत्यादि सभी बसते हैं, तो भी वह (45) _____ है। इसी प्रकार, यदि हम सभी भाषाओं से उत्तम और आवश्यक शब्द लेंगे, तो भी हिंदी ही रहेगी।

SubQuestion No : 16

Q.16 निम्न विकल्पों में से उचित शब्द का चयन कर अनुच्छेद में रिक्त स्थान की पूर्ति करें।(41)

- Ans**
- ☒ 1. सार्विक
 - ☒ 2. सार्वत्रिक
 - ☒ 3. सार्वलौकिक
 - ☒ 4. सार्वजनिक

Comprehension:

निम्नलिखित गद्यांश को पढ़कर प्रश्नों के उत्तर दीजिए-

राष्ट्रभाषा से यह अभिप्राय है कि वह अंतरांतीय व्यापार और (41) _____ व्यवहार में सभी प्रांतों में रहनेवालों द्वारा बरती जाए और बदरीनाथ से रामेश्वरम् तक तथा अमृतसर से कटक तक सभी स्थानों में परस्पर बातचीत करने और (42) _____ में काम लाई जाए। राष्ट्रभाषा होने की अधिकाधिक योग्यता हिंदी में आनी और लानी चाहिए। आज के युग में जब वैज्ञानिक आविष्कार के कारण दुनिया से स्थान और समय की दूरी समाप्त होती जा रही है, कोई भी भाषा दूसरी भाषा के संपर्क से अपने को (43) _____ नहीं रख सकती। हिंदी का यह एक विशेष गुण है कि उसने हिंदुओं की भाषा होते हुए भी अरबी, फारसी, अंगरेजी इत्यादि के शब्दों को अछूत नहीं समझा। (44) _____ की नीति तो वह कदापि स्वीकार नहीं कर सकती और न विदेशी शब्दों को ही बाहर रखकर वह अपनी उन्नति कर सकती है। हिंदुस्तान में हिंदू, मुसलमान, ईसाई, सिख इत्यादि सभी बसते हैं, तो भी वह (45) _____ है। इसी प्रकार, यदि हम सभी भाषाओं से उत्तम और आवश्यक शब्द लेंगे, तो भी हिंदी ही रहेगी।

SubQuestion No : 17

Q.17 निम्न विकल्पों में से उचित शब्द का चयन कर अनुच्छेद में रिक्त स्थान की पूर्ति करें।(42)

- Ans**
- ☒ 1. विचार - क्रम
 - ☒ 2. विचार - स्वातंत्र्य
 - ☒ 3. विचार - विज्ञ
 - ☒ 4. विचार - विनिमय

Comprehension:

निम्नलिखित गद्यांश को पढ़कर प्रश्नों के उत्तर दीजिए-

राष्ट्रभाषा से यह अभिप्राय है कि वह अंतरांतीय व्यापार और (41) _____ व्यवहार में सभी प्रांतों में रहनेवालों द्वारा बरती जाए और बदरीनाथ से रामेश्वरम् तक तथा अमृतसर से कटक तक सभी स्थानों में परस्पर बातचीत करने और (42) _____ में काम लाई जाए। राष्ट्रभाषा होने की अधिकाधिक योग्यता हिंदी में आनी और लानी चाहिए। आज के युग में जब वैज्ञानिक आविष्कार के कारण दुनिया से स्थान और समय की दूरी समाप्त होती जा रही है, कोई भी भाषा दूसरी भाषा के संपर्क से अपने को (43) _____ नहीं रख सकती। हिंदी का यह एक विशेष गुण है कि उसने हिंदुओं की भाषा होते हुए भी अरबी, फारसी, अंगरेजी इत्यादि के शब्दों को अछूत नहीं समझा। (44) _____ की नीति तो वह कदापि स्वीकार नहीं कर सकती और न विदेशी शब्दों को ही बाहर रखकर वह अपनी उन्नति कर सकती है। हिंदुस्तान में हिंदू, मुसलमान, ईसाई, सिख इत्यादि सभी बसते हैं, तो भी वह (45) _____ है। इसी प्रकार, यदि हम सभी भाषाओं से उत्तम और आवश्यक शब्द लेंगे, तो भी हिंदी ही रहेगी।

SubQuestion No : 18

Q.18 निम्न विकल्पों में से उचित शब्द का चयन कर अनुच्छेद में रिक्त स्थान की पूर्ति करें।(43)

- Ans**
- ☒ 1. अछोह
 - ☒ 2. अछूता
 - ☒ 3. अचिति
 - ☒ 4. अचूक

Comprehension:

निम्नलिखित गद्यांश को पढ़कर प्रश्नों के उत्तर दीजिए-

राष्ट्रभाषा से यह अभिप्राय है कि वह अंतरप्रांतीय व्यापार और (41) _____ व्यवहार में सभी प्रांतों में रहनेवालों द्वारा बरती जाए और बदरीनाथ से रामेश्वरम् तक तथा अमृतसर से कटक तक सभी स्थानों में परस्पर बातचीत करने और (42) _____ में काम लाई जाए। राष्ट्रभाषा होने की अधिकाधिक योग्यता हिंदी में आनी और लानी चाहिए। आज के युग में जब वैज्ञानिक आविष्कार के कारण दुनिया से स्थान और समय की दूरी समाप्त होती जा रही है, कोई भी भाषा दूसरी भाषा के संपर्क से अपने को (43) _____ नहीं रख सकती। हिंदी का यह एक विशेष गुण है कि उसने हिंदुओं की भाषा होते हुए भी अरबी, फारसी, अंगरेजी इत्यादि के शब्दों को अछूत नहीं समझा। (44) _____ की नीति तो वह कदापि स्वीकार नहीं कर सकती और न विदेशी शब्दों को ही बाहर रखकर वह अपनी उन्नति कर सकती है। हिंदुस्तान में हिंदू, मुसलमान, ईसाई, सिख इत्यादि सभी बसते हैं, तो भी वह (45) _____ है। इसी प्रकार, यदि हम सभी भाषाओं से उत्तम और आवश्यक शब्द लेंगे, तो भी हिंदी ही रहेगी।

SubQuestion No : 19

Q.19 निम्न विकल्पों में से उचित शब्द का चयन कर अनुच्छेद में रिक्त स्थान की पूर्ति करें।(44)

- Ans**
- ☒ 1. बहिश्वर
 - ☒ 2. बधियाना
 - ☒ 3. बहिष्कार
 - ☒ 4. बहिनापा

Comprehension:

निम्नलिखित गद्यांश को पढ़कर प्रश्नों के उत्तर दीजिए-

राष्ट्रभाषा से यह अभिप्राय है कि वह अंतरप्रांतीय व्यापार और (41) _____ व्यवहार में सभी प्रांतों में रहनेवालों द्वारा बरती जाए और बदरीनाथ से रामेश्वरम् तक तथा अमृतसर से कटक तक सभी स्थानों में परस्पर बातचीत करने और (42) _____ में काम लाई जाए। राष्ट्रभाषा होने की अधिकाधिक योग्यता हिंदी में आनी और लानी चाहिए। आज के युग में जब वैज्ञानिक आविष्कार के कारण दुनिया से स्थान और समय की दूरी समाप्त होती जा रही है, कोई भी भाषा दूसरी भाषा के संपर्क से अपने को (43) _____ नहीं रख सकती। हिंदी का यह एक विशेष गुण है कि उसने हिंदुओं की भाषा होते हुए भी अरबी, फारसी, अंगरेजी इत्यादि के शब्दों को अछूत नहीं समझा। (44) _____ की नीति तो वह कदापि स्वीकार नहीं कर सकती और न विदेशी शब्दों को ही बाहर रखकर वह अपनी उन्नति कर सकती है। हिंदुस्तान में हिंदू, मुसलमान, ईसाई, सिख इत्यादि सभी बसते हैं, तो भी वह (45) _____ है। इसी प्रकार, यदि हम सभी भाषाओं से उत्तम और आवश्यक शब्द लेंगे, तो भी हिंदी ही रहेगी।

SubQuestion No : 20

Q.20 निम्न विकल्पों में से उचित शब्द का चयन कर अनुच्छेद में रिक्त स्थान की पूर्ति करें।(45)

- Ans**
- ☒ 1. राजस्तान
 - ☒ 2. पाकिस्तान
 - ☒ 3. हिंदुस्तान
 - ☒ 4. हिंदुआनी