

Constable GD in CAPFs and SSF Rifleman GD in AR and Sepoy in NCB Examination 2025

Exam Date	11/02/2025
Exam Time	3:00 PM - 4:00 PM
Subject	Constable GD Examination 2025

Section : Part-A-General Intelligence and Reasoning

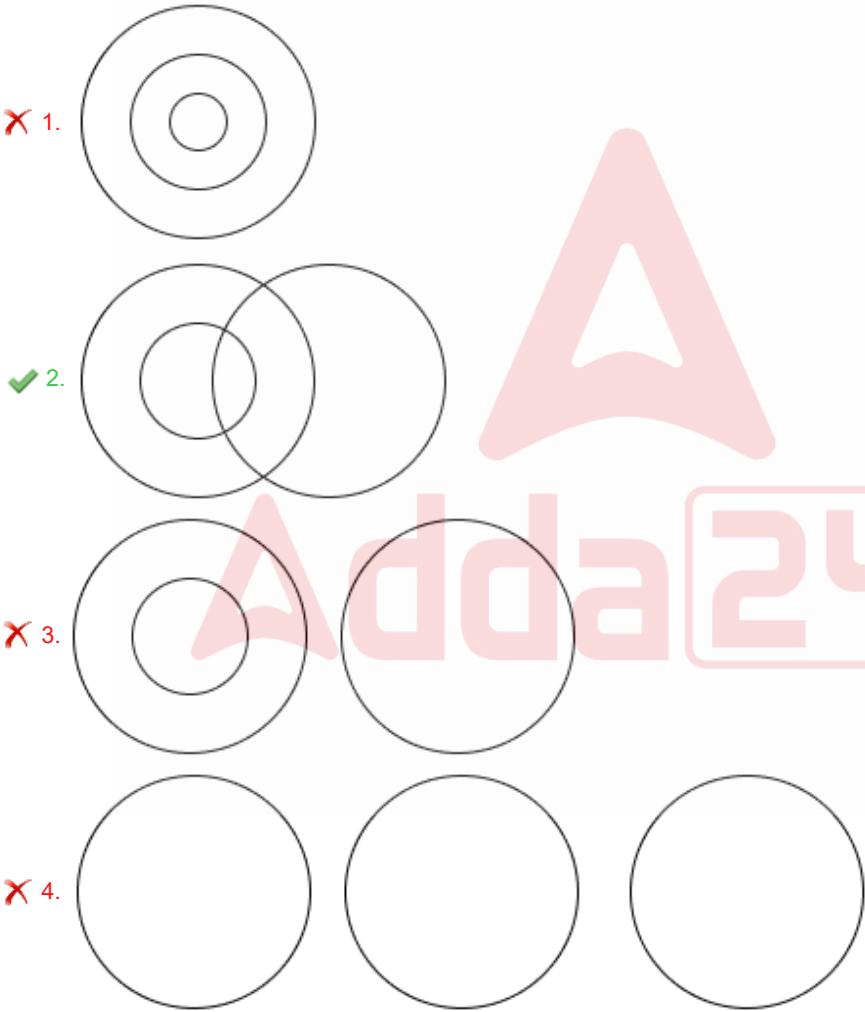
Q.1 In a certain code language, 'TDYI' is coded as '116' and 'NRDP' is coded as '104'. What is the code for 'LAWG' in the given language?

- Ans
- 1. 77
  - 2. 82
  - 3. 86
  - 4. 72

Q.2 Select the Venn diagram that best illustrates the relationship among the following classes.

Doctors, Surgeons, Men

Ans



Q.3 Select the combination of letters that when sequentially placed in the blanks of the given series, will logically complete the series.

\_YUXT\_SVRU\_TPSO\_NQM\_

- Ans
- 1. TXSUO
  - 2. VWQRP
  - 3. TWSRO
  - 4. VXQUP

Adda247

# Test Prime

**ALL EXAMS, ONE SUBSCRIPTION**



**1,00,000+**  
Mock Tests



**Personalised  
Report Card**



**Unlimited  
Re-Attempt**



**600+**  
Exam Covered



**25,000+** Previous  
Year Papers



**500%**  
Refund



**ATTEMPT FREE MOCK NOW**

Q.4 In a certain code language.

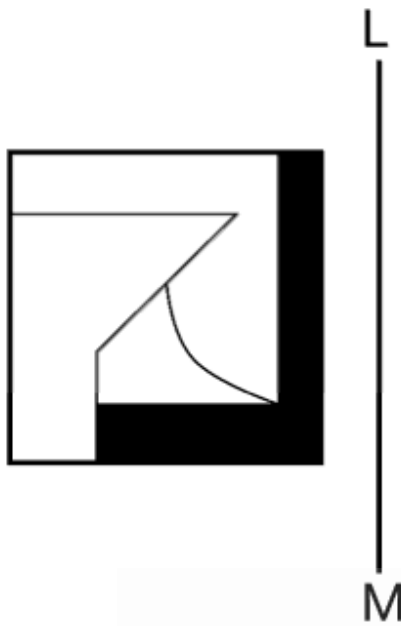
'Y + F' means 'Y is the daughter of F',  
'Y - F' means 'Y is the son of F',  
'Y @ F' means 'Y is the sister of F' and  
'Y # F' means 'Y is the father of F'.

Based on the above, how is S related to A if 'A + H @ S - C'?

- Ans
- ☐ 1. Sister's daughter
  - ☐ 2. Mother's sister
  - ☐ 3. Sister
  - ☒ 4. Mother's brother

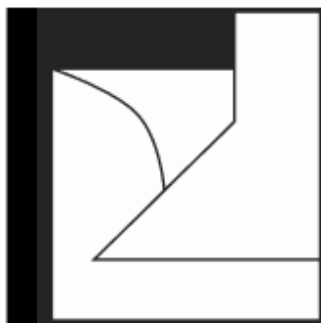


Q.5 Select the correct mirror image of the given figure when the mirror is placed at LM as shown below.

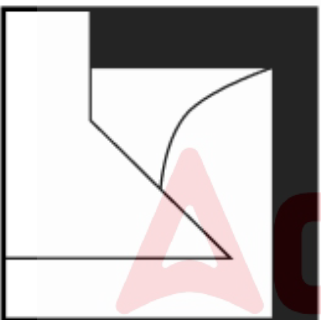


Ans

✗ 1.



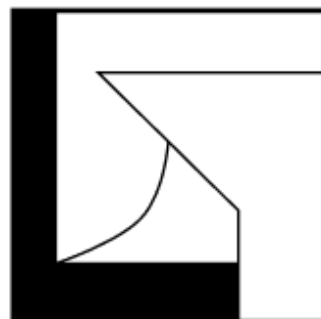
✗ 2.



✗ 3.



✓ 4.

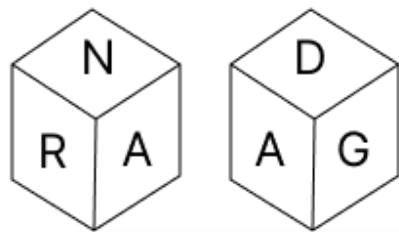


Q.6 What will come in the place of the question mark '(?)' in the following equation, if '÷' and 'x' are interchanged and '+' and '-' are interchanged?

$45 - 2 \div 8 + 2 \times 2 = ?$

- Ans
- ☒ 1. 61
  - ☒ 2. 60
  - ☒ 3. 62
  - ☒ 4. 59

Q.7 A dice has its faces marked by letters G, E, D, A, N and R. Two positions of the same dice are shown in the given figures. Which face is opposite to face E?



- Ans
- ☒ 1. N
  - ☒ 2. G
  - ☒ 3. A
  - ☒ 4. D

Q.8 What should come in place of (?) in the given series based on the English alphabetical order?

MTD, JRC, GPB, DNA, ?

- Ans
- ☒ 1. CNY
  - ☒ 2. CMX
  - ☒ 3. BMX
  - ☒ 4. ALZ

Q.9 Seven people A, B, C, D, E, F and G are sitting in a straight line facing the north (but not necessarily in the same order) . B is sitting to the immediate right of D and the immediate left of F. A is sitting to the immediate left of E and the immediate right of F. G is sitting to the immediate right of E and the immediate left of C. Who is sitting at the left end of the line?

- Ans
- ☒ 1. F
  - ☒ 2. G
  - ☒ 3. E
  - ☒ 4. D

Q.10 NRNL is related to IMIG in a certain way based on the English alphabetical order. In the same way, PTPN is related to KOKI. To which of the given options is DHDB related, following the same logic?


- Ans
- ☒ 1. YCYW
  - ☒ 2. YBXW
  - ☒ 3. YDXE
  - ☒ 4. YCXW


Q.11 Read the given statements and conclusions carefully. Assuming that the information given in the statements is true, even if it appears to be at variance with commonly known facts, decide which of the given conclusion(s) logically follow(s) from the statements.


Statements:  
 All sprouts are lentils.  
 Some lentils are ramens.  
 Some ramens are pastas.


Conclusions:  
 (I) Some pastas are sprouts.  
 (II) Some ramens are sprouts.

- Ans

 1. Only conclusion (II) follows.

 2. Neither conclusion (I) nor (II) follows.

 3. Only conclusion (I) follows.

 4. Both conclusions (I) and (II) follow.

Q.12 The position(s) of how many letters will remain unchanged if each letter in the word MIGHTY is arranged in the English alphabetical order?

- Ans

 1. Two

 2. None

 3. One

 4. Three

Q.13 CJ 16 is related to DF 9 in a certain way. In the same way, FK 9 is related to GG 2. To which of the following is OO 2 related following the same logic?

- Ans

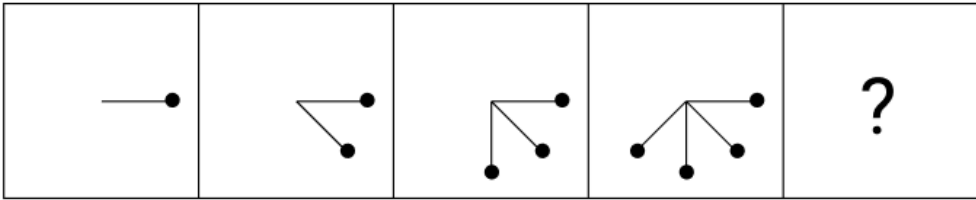
 1. PK -5

 2. PR -2

 3. SP -6

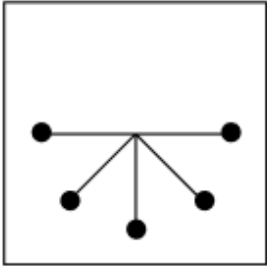
 4. LP -4

Q.14 Select the figure from among the given options that can replace the question mark (?) in the following series.



Ans

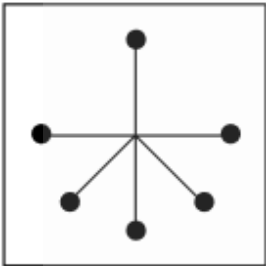
✓ 1.



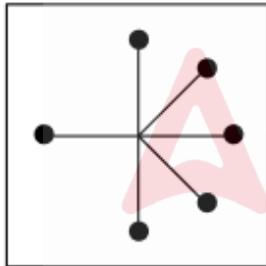
✗ 2.



✗ 3.



✗ 4.



Q.15 What should come in place of the question mark (?) in the given series?  
7, 10, 16, 25, ?, 52

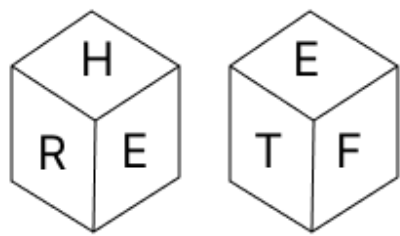
- Ans
- ✗ 1. 36
  - ✗ 2. 35
  - ✓ 3. 37
  - ✗ 4. 38

Q.16 Based on the English alphabetical order, three of the following four letter-clusters are alike in a certain way and thus form a group. Which letter-cluster DOES NOT belong to that group?

(Note: The odd man out is not based on the number of consonants/vowels or their position in the letter-cluster.)

- Ans
- ✓ 1. BIO
  - ✗ 2. UBI
  - ✗ 3. SZG
  - ✗ 4. KRY

Q.17 A dice has its faces marked by letters T, F, H, A, R and E. Two positions of the same dice are shown in the given figures. Which face is opposite to face A?



- Ans
- ☒ 1. E
  - ☐ 2. H
  - ☐ 3. F
  - ☐ 4. R

Q.18 What should come in place of the question mark (?) in the given series?

670 668 671 666 673 662 676 ?

- Ans
- ☐ 1. 680
  - ☒ 2. 656
  - ☐ 3. 654
  - ☐ 4. 681

Q.19 In a certain code language, 'DAYS' is coded as '7812' and 'AIDS' is coded as '1237'. What is the code for 'I' in the given code language?

- Ans
- ☐ 1. 7
  - ☒ 2. 3
  - ☐ 3. 2
  - ☐ 4. 1

Q.20 G, H, I, J, K, L and M are sitting around a circular table, facing the centre of the table (but not necessarily in the same order). K sits to the immediate right of L. Only three people sit between K and M when counted from the left of K. Only three people sit between L and H. J sits to the immediate right of I. How many people sit between L and I when counted from the left of I?

- Ans
- ☒ 1. Four
  - ☐ 2. Three
  - ☐ 3. Two
  - ☐ 4. One

Section : Part-B-General Knowledge and General awareness

Q.1 Who was the Greek envoy who visited the Mauryan capital Pataliputra and whose account is a key source for the Mauryan period?

- Ans
- ☐ 1. Pliny
  - ☒ 2. Megasthenes
  - ☐ 3. Herodotus
  - ☐ 4. Arrian

Q.2 As per SRS Bulletin 2020, what was the birth rate in India?

- Ans
- ☐ 1. 23.3
  - ☒ 2. 19.5
  - ☐ 3. 17.6
  - ☐ 4. 21.8



Q.3 Who led the Salt March to Dandi in 1930?


- Ans
-  1. Rajendra Prasad


 2. Sardar Vallabhbhai Patel

 3. Mahatma Gandhi

 4. Jawaharlal Nehru

Q.4 In which of the following Five-Year Plans was the minimum needs programme introduced?


- Ans
-  1. Fourth


 2. Sixth


 3. Third


 4. Fifth

Q.5 Out of the following events, which event is NOT a part of Competitive Yogasana Sports?


- Ans
-  1. Artistic Yogasana (Single)


 2. Rhythmic Yogasana (Single)


 3. Traditional Yogasana


 4. Artistic Yogasana (Pair)

Q.6 Union Minister Dr. Jitendra Singh received the 'Lifetime Achievement Award' for his significant contributions in which field?

- Ans
-  1. Child care and research

 2. Cancer research

 3. Dermatology research

 4. Diabetes care and research

Q.7 The Chief Justice and Judges of High Courts are appointed by who among the following?


- Ans
-  1. Chief Minister


 2. President


 3. Prime Minister


 4. Governor

Q.8 The celebrations for which of the following festivals are held for ten days in the month of Chingam (August/September) as per the local traditions in India?

- Ans
-  1. Makar Sankranti

 2. Bihu

 3. Pongal

 4. Onam

Q.9 Which sectors should work together to be known as a mixed economy?


- Ans
-  1. Private and Corporate


 2. Government and Cooperative


 3. Foreign and Private


 4. Government and Private

Q.10 How many members were there in the Constituent Assembly on 31<sup>st</sup> December 1947?

- Ans
-  1. 195

 2. 200

 3. 334

 4. 299

Q.11 According to the Census of India 2011, which of the following union territories has the lowest population?

- Ans
- ☒

1. Chandigarh
- ☒

2. Puducherry
- ☒

3. Dadra and Nagar Haveli
- ☒

4. Daman and Diu

Q.12 Mayurbhanj Chhau is a tribal dance form of \_\_\_\_\_.

- Ans
- ☒

1. Bihar
- ☒

2. Odisha
- ☒

3. Assam
- ☒

4. Tripura

Q.13 In table tennis, what is the maximum number of consecutive lets permitted during a serve?

- Ans
- ☒

1. No limit
- ☒

2. Two
- ☒

3. One
- ☒

4. Three

Q.14 Which mountain range is triangular in shape, with its apex at Ratnapuri, the other two sides parallel to Tapti and the holy Narmada river?

- Ans
- ☒

1. Pir Panjal Range
- ☒

2. Satpura Range
- ☒

3. Purvanchal Range
- ☒

4. Aravalli Range

Q.15 Who among the following was a Shehnai player and performed at Delhi's Red Fort as the Indian flag unfurled at the hour of India's independence on 15 August 1947?

- Ans
- ☒

1. Ali Akbar Khan
- ☒

2. Bismillah Khan
- ☒

3. Hemant Kumar
- ☒

4. Ramnad Raghavan

Q.16 In 1887, whose work did Heinrich Rudolf Hertz apply to conduct a series of experiments from which he generated radio waves?

- Ans
- ☒

1. Thomas Young
- ☒

2. James Clerk Maxwell
- ☒

3. Christian Doppler
- ☒

4. Christiaan Huygens

Q.17 Yamini Krishnamurthy was recognised as the 'Asthana Narthaki' of which style of dance?

- Ans
- ☒

1. Bharatanatyam and Kuchipudi
- ☒

2. Mohiniattam and Sattriya
- ☒

3. Odissi and Kathak
- ☒

4. Kathakali and Manipuri

Q.18 Who is the cabinet minister of the Ministry of Panchayati Raj, as of September 2024?

- Ans
- ☒

1. Nitin Jairam Gadkari
- ☒

2. Piyush Goyal
- ☒

3. Dharmendra Pradhan
- ☒

4. Rajiv Ranjan Singh

Q.19 What was the impact of the global oil crisis of 1973 on the Fifth Five Year Plan (1974-1979)?

- Ans
- ☒ 1. Accelerated the plan's industrialisation objectives
  - ☒ 2. Caused economic disruptions and re-prioritisation
  - ☒ 3. It had no significant impact on the plan.
  - ☒ 4. Led to a reduction in agricultural focus

Q.20 Which of the following plants is a Pteridophyte which is usually found in moist, shady places or gardens and on hills where the temperatures are low?

- Ans
- ☒ 1. Porphyra
  - ☒ 2. Sphagnum
  - ☒ 3. Riccia
  - ☒ 4. Ferns

Section : Part-C-Elementary Mathematics

Q.1 A shopkeeper bought an article for ₹520. At what price (in ₹) should he sell the article to make 30% profit?

- Ans
- ☒ 1. 364
  - ☒ 2. 688
  - ☒ 3. 676
  - ☒ 4. 664

Q.2 Find the value of  $\left[ (12 \times 10) \times \left\{ 6 \div 6 \times \frac{(15 - 12)}{3} \right\} \right]$

- Ans
- ☒ 1. 120
  - ☒ 2. 138
  - ☒ 3. 122
  - ☒ 4. 109

Q.3 The price (per litre) of petrol increases by 75%. By what percent should its consumption be reduced such that the expenditure on it increases by 47% only?

- Ans
- ☒ 1. 16%
  - ☒ 2. 77%
  - ☒ 3. 26%
  - ☒ 4. 84%

Q.4 The marked price of an electronic watch in a store is ₹45,880 and it is available at a discount of 25%. What is the price (in ₹) that a customer pays if he buys it from the store?

- Ans
- ☒ 1. 31,440
  - ☒ 2. 34,410
  - ☒ 3. 31,400
  - ☒ 4. 34,140

Q.5 The perimeter of a rectangle is 26 cm and its length is 7 cm. Find its area in cm<sup>2</sup>.

- Ans
- ☒ 1. 32
  - ☒ 2. 42
  - ☒ 3. 36
  - ☒ 4. 48

**Q.6** The greatest number that will divide 42, 84 and 153 so as to leave the same remainder in each case is:

- Ans**
- ☐ 1. 7
  - ☐ 2. 5
  - ☒ 3. 3
  - ☐ 4. 9

**Q.7** Anil has ₹1224 with him. He divided it amongst his sons Ashok and Raj and asked them to invest it at 4% rate of interest compounded annually. It was seen that Ashok and Raj got same amount after 13 and 14 years respectively. How much (in ₹) did Anil give to Raj?

- Ans**
- ☐ 1. 450
  - ☐ 2. 624
  - ☒ 3. 600
  - ☐ 4. 724

**Q.8** A can do a piece of work in 15 days and B can do it in 24 days. If they do the work alternately, in how many days will they finish the work, provided that A begins the work?

- Ans**
- ☐ 1.  $18\frac{1}{4}$
  - ☒ 2.  $18\frac{3}{8}$
  - ☐ 3. 17
  - ☐ 4.  $17\frac{2}{5}$

**Q.9** The simple interest on a principal amount (in ₹) is ₹284 for a period of 2 years at the rate of 5% per annum. The principal amount (in ₹) is:

- Ans**
- ☐ 1. 2832
  - ☒ 2. 2840
  - ☐ 3. 2844
  - ☐ 4. 2845

**Q.10** The average weight of Atul, Baban and Rakesh is 46 kg. If the average weight of Atul and Baban be 39 kg and that of Baban and Rakesh be 50 kg, then the weight of Baban (in kg) is:

- Ans**
- ☐ 1. 60
  - ☐ 2. 50
  - ☐ 3. 55
  - ☒ 4. 40

**Q.11** On a circular path of 432 m, Soham and Rohan start running from the same point and in same direction at the speed of 12 m/sec and 9 m/sec, respectively. Find the time in which they will meet for the first time.

- Ans**
- ☐ 1. 98 seconds
  - ☒ 2. 144 seconds
  - ☐ 3. 156 seconds
  - ☐ 4. 112 seconds

Q.12

Find the value of  $\left[ (14 \times 9) \times \left\{ 8 \div 2 \times \frac{(18 - 15)}{3} \right\} \right]$

- Ans
- ☐ 1. 517
  - ☒ 2. 504
  - ☐ 3. 521
  - ☐ 4. 513

Q.13 Akshay has ₹1218 with him. He divided it amongst his sons Arjun and Kartik and asked them to invest it at 10% rate of interest compounded annually. It was seen that Arjun and Kartik got same amount after 12 and 13 years respectively. How much (in ₹) did Akshay give to Kartik?

- Ans
- ☐ 1. 430
  - ☐ 2. 738
  - ☒ 3. 580
  - ☐ 4. 638

Q.14 A number is increased by 50% and then again by 50%. By what percentage should the increased number be reduced so as to get back the original number?

- Ans
- ☐ 1.  $40\frac{2}{3}\%$
  - ☒ 2.  $55\frac{5}{9}\%$
  - ☐ 3.  $50\frac{1}{5}\%$
  - ☐ 4.  $45\frac{4}{3}\%$

Q.15 Find the mean proportional between 6 and 150.

- Ans
- ☐ 1. 90
  - ☐ 2. 45
  - ☐ 3. 60
  - ☒ 4. 30

Q.16 400 mangoes were bought at ₹1210 per hundred and were sold at a profit of ₹960. Find the selling price (in ₹) per dozen of mangoes.

- Ans
- ☐ 1. 164
  - ☒ 2. 174
  - ☐ 3. 184
  - ☐ 4. 189

Q.17 Find the ratio between the third proportional of 12 and 42 with the third proportional of 16 and 56.

- Ans
- ☒ 1. 3 : 4
  - ☐ 2. 2 : 3
  - ☐ 3. 5 : 6
  - ☐ 4. 4 : 5

Q.18 The time period of a simple pendulum is found to be 2.2 sec, 1.8 sec, 2 sec, 1.6 sec and 2.4 sec. What is the average time period (in sec)?

- Ans
- ☐ 1. 2.4
  - ☐ 2. 2.2
  - ☒ 3. 2
  - ☐ 4. 1.6

Q.19 Two trains having lengths of 300 m and 200 m are running at speeds of 70 km/h and 120 km/h, respectively, in the same direction. The time taken (in minutes) by the faster train, coming from behind, to completely cross the other train is:

- Ans
- ☐ 1. 3
  - ☐ 2. 2
  - ☐ 3. 3.9
  - ☒ 4. 0.6

Q.20 When 7516, 7635 and 7992 are divided by the greatest number x, then the remainder in each case is the same. The product of the digits of x is:

- Ans
- ☒ 1. 9
  - ☐ 2. 6
  - ☐ 3. 8
  - ☐ 4. 4

Section : Part-D-English

Q.1 Select the most appropriate option to fill in the blank.  
My friend has gone to Kerala on vacation, but I have no special plans. I will stay home and \_\_\_\_\_.

- Ans
- ☐ 1. pitch in
  - ☐ 2. iron out
  - ☐ 3. slip up
  - ☒ 4. goof off

Q.2 Parts of the following sentence have been given as options. Select the option that contains a grammatical error.  
  
The Chairman instructed the managers that he shall been holding a meeting in Alberto Hall tomorrow evening.

- Ans
- ☐ 1. managers that he
  - ☒ 2. shall been holding a meeting
  - ☐ 3. in Alberto Hall tomorrow evening.
  - ☐ 4. The Chairman instructed the

Q.3 The following sentence has been split into four segments. Identify the segment that contains a grammatical error.

(A) The team worked diligently / (B) to meet the project deadline, / (C) collaborating seamless to ensure / (D) every detail was accounted for and polished.

- Ans
- ☒ 1. C
  - ☐ 2. A
  - ☐ 3. B
  - ☐ 4. D

Q.4 Select the most appropriate option to fill in the blank.  
The artist's \_\_\_\_\_ use of colour made the painting boring and dull.

- Ans
- ☒ 1. drab
  - ☐ 2. vibrant
  - ☐ 3. exceptional
  - ☐ 4. exciting

**Q.5**    Select the word from among the given options that is closest in meaning to the underlined word in the given sentence.

Ajay was cautious when investing in the stock market.

- Ans

 1. Elaborate

 2. Careful


 3. Heedless


 4. Lax


**Q.6**    Select the most appropriate meaning of the given idiom.


Burn the midnight oil

- Ans

 1. To waste time

 2. To extinguish a flame

 3. To work late into the night

 4. To literally burn oil at midnight

**Q.7**    Select the correct spelling of the underlined incorrectly spelt word in the given sentence.

Kashiram was very sympathetic towards his housekeeper.

- Ans

 1. symphathetik

 2. simpatetic


 3. sympathetic


 4. simpathetic


**Q.8**    Select the most appropriate ANTONYM of the given word.


Accurate

- Ans

 1. Faulty

 2. Errorless

 3. Correct

 4. Careful

**Q.9**    Select the INCORRECTLY spelt word.

- Ans

 1. Embarrassment

 2. Inadvertent

 3. Maintenance

 4. Necessary

**Q.10**    Select the word that best completes the given sentence. Determine the collocation through the sentence.

Ms. Suma aims to maintain \_\_\_\_\_ standards of customer care.

- Ans

 1. confident

 2. high

 3. loyal

 4. expensive

Q.11 Which word best replaces the underlined word in the sentence?

The chef used a wonderful blend of spices to flavour the dish.

- Ans

✓

1. an exotic

✗

2. an essential

✗

3. a supernatural

✗

4. a bland

Q.12 Select the most appropriate option to fill in the blank.

After years of hard work, he finally \_\_\_\_\_ his dream of becoming a doctor.

- Ans

✓

1. accomplished

✗

2. forfeit

✗

3. solved

✗

4. tried

Q.13 Select the word from among the given options that is closest in meaning to the underlined word in the given sentence.

For leisure, Arjun prefers to unwind by playing chess with friends.

- Ans

✗

1. Incarceration

✗

2. Labour

✗

3. Profit

✓

4. Relaxation

Q.14 Select the most appropriate ANTONYM of the underlined word in the sentence given below.

An important meeting ended up in farce because of the miscreants.

- Ans

✗

1. Mockery

✗

2. Chaos

✓

3. Tragedy

✗

4. Charity

Q.15 Select the most appropriate ANTONYM of the given word.

Diligent

- Ans

✗

1. Persistent

✗

2. Industrious

✗

3. Hardworking

✓

4. Inactive



### Comprehension:

In the following passage, some words have been deleted. Read the passage carefully and select the most appropriate option to fill in each blank.

We often encounter people who appear delightful on the surface but are secretly struggling with inner sadness because they don't have money. For many, (1) \_\_\_\_\_ is often viewed as the key to happiness or sorrow. However, this is a misconception. While (2) \_\_\_\_\_ can provide material comforts such as food, luxurious homes, a healthy lifestyle and various conveniences, it cannot purchase true happiness.

If wealth were the source of happiness, the rich would undoubtedly be the happiest individuals on earth. However, what we observe is quite the opposite—many wealthy people are plagued by (3) \_\_\_\_\_, anxiety, fear, stress and a variety of other problems.

In conclusion, (4) \_\_\_\_\_ is unrelated to happiness and true joy often comes from non-material aspects of life, such as relationships and personal fulfillment. Therefore, it is essential to recognise that (5) \_\_\_\_\_ can be found within oneself rather than in external possessions.

### SubQuestion No : 16

**Q.16** Select the most appropriate option to fill in blank number 1.

- Ans**
- ☒ 1. knowledge
  - ☒ 2. wealth
  - ☒ 3. friendship
  - ☒ 4. love

### Comprehension:

In the following passage, some words have been deleted. Read the passage carefully and select the most appropriate option to fill in each blank.

We often encounter people who appear delightful on the surface but are secretly struggling with inner sadness because they don't have money. For many, (1) \_\_\_\_\_ is often viewed as the key to happiness or sorrow. However, this is a misconception. While (2) \_\_\_\_\_ can provide material comforts such as food, luxurious homes, a healthy lifestyle and various conveniences, it cannot purchase true happiness.

If wealth were the source of happiness, the rich would undoubtedly be the happiest individuals on earth. However, what we observe is quite the opposite—many wealthy people are plagued by (3) \_\_\_\_\_, anxiety, fear, stress and a variety of other problems.

In conclusion, (4) \_\_\_\_\_ is unrelated to happiness and true joy often comes from non-material aspects of life, such as relationships and personal fulfillment. Therefore, it is essential to recognise that (5) \_\_\_\_\_ can be found within oneself rather than in external possessions.

### SubQuestion No : 17

**Q.17** Select the most appropriate option to fill in blank number 2.

- Ans**
- ☒ 1. love
  - ☒ 2. money
  - ☒ 3. success
  - ☒ 4. knowledge

### Comprehension:

In the following passage, some words have been deleted. Read the passage carefully and select the most appropriate option to fill in each blank.

We often encounter people who appear delightful on the surface but are secretly struggling with inner sadness because they don't have money. For many, (1) \_\_\_\_\_ is often viewed as the key to happiness or sorrow. However, this is a misconception. While (2) \_\_\_\_\_ can provide material comforts such as food, luxurious homes, a healthy lifestyle and various conveniences, it cannot purchase true happiness.

If wealth were the source of happiness, the rich would undoubtedly be the happiest individuals on earth. However, what we observe is quite the opposite—many wealthy people are plagued by (3) \_\_\_\_\_, anxiety, fear, stress and a variety of other problems.

In conclusion, (4) \_\_\_\_\_ is unrelated to happiness and true joy often comes from non-material aspects of life, such as relationships and personal fulfillment. Therefore, it is essential to recognise that (5) \_\_\_\_\_ can be found within oneself rather than in external possessions.

### SubQuestion No : 18

**Q.18** Select the most appropriate option to fill in blank number 3.

- Ans**
- ☒ 1. success
  - ☒ 2. happiness
  - ☒ 3. sadness
  - ☒ 4. contentment

**Comprehension:**

In the following passage, some words have been deleted. Read the passage carefully and select the most appropriate option to fill in each blank.

We often encounter people who appear delightful on the surface but are secretly struggling with inner sadness because they don't have money. For many, (1) \_\_\_\_\_ is often viewed as the key to happiness or sorrow. However, this is a misconception. While (2) \_\_\_\_\_ can provide material comforts such as food, luxurious homes, a healthy lifestyle and various conveniences, it cannot purchase true happiness.

If wealth were the source of happiness, the rich would undoubtedly be the happiest individuals on earth. However, what we observe is quite the opposite—many wealthy people are plagued by (3) \_\_\_\_\_, anxiety, fear, stress and a variety of other problems.

In conclusion, (4) \_\_\_\_\_ is unrelated to happiness and true joy often comes from non-material aspects of life, such as relationships and personal fulfillment. Therefore, it is essential to recognise that (5) \_\_\_\_\_ can be found within oneself rather than in external possessions.

**SubQuestion No : 19**

**Q.19** Select the most appropriate option to fill in blank number 4.

- Ans**
- ☒ 1. excitement
  - ☒ 2. satisfaction
  - ☒ 3. wealth
  - ☒ 4. joy

**Comprehension:**

In the following passage, some words have been deleted. Read the passage carefully and select the most appropriate option to fill in each blank.

We often encounter people who appear delightful on the surface but are secretly struggling with inner sadness because they don't have money. For many, (1) \_\_\_\_\_ is often viewed as the key to happiness or sorrow. However, this is a misconception. While (2) \_\_\_\_\_ can provide material comforts such as food, luxurious homes, a healthy lifestyle and various conveniences, it cannot purchase true happiness.

If wealth were the source of happiness, the rich would undoubtedly be the happiest individuals on earth. However, what we observe is quite the opposite—many wealthy people are plagued by (3) \_\_\_\_\_, anxiety, fear, stress and a variety of other problems.

In conclusion, (4) \_\_\_\_\_ is unrelated to happiness and true joy often comes from non-material aspects of life, such as relationships and personal fulfillment. Therefore, it is essential to recognise that (5) \_\_\_\_\_ can be found within oneself rather than in external possessions.

**SubQuestion No : 20**

**Q.20** Select the most appropriate option to fill in blank number 5.

- Ans**
- ☒ 1. happiness
  - ☒ 2. social status
  - ☒ 3. financial help
  - ☒ 4. success

**Section : Part-D-Hindi**

**Q.1** निम्नलिखित वाक्य को ध्यानपूर्वक पढ़ें और वाक्य में उपलब्ध त्रुटिपूर्ण शब्द की पहचान करें।

यदि सही दिशा में प्रयास किया जाए तो शने शने सफलता मिलने लगती है।

- Ans**
- ☒ 1. प्रयास
  - ☒ 2. शनेशने
  - ☒ 3. सफलता
  - ☒ 4. दिशा

**Q.2** निम्नलिखित वाक्य में रेखांकित खंड के स्थान पर प्रयुक्त होने वाले सबसे उपयुक्त विकल्प का चयन कीजिए-

बच्चे मैदान में विद्यालय के खेल रहे हैं।

- Ans**
- ☒ 1. विद्यालय के मैदान में
  - ☒ 2. के मैदान विद्यालय में
  - ☒ 3. विद्यालय में मैदान के
  - ☒ 4. के मैदान में विद्यालय

Q.3 निम्नलिखित वाक्यांश हेतु सार्थक शब्द की पहचान करें।  
जिसका कोई आरंभ न हो

- Ans
- ☒ 1. आगे
  - ☒ 2. आदि
  - ☒ 3. अनादि
  - ☒ 4. पीछे

Q.4 'वैवाहारिक रूप से आपका मंतव्य पूर्णरूपेण उचित है।'

उपर्युक्त वाक्य में अशुद्ध शब्द है -

- Ans
- ☒ 1. पूर्णरूपेण
  - ☒ 2. उचित
  - ☒ 3. मंतव्य
  - ☒ 4. वैवाहारिक

Q.5 निम्न में से 'अंकुर' का पर्याय है-

- Ans
- ☒ 1. कोंपल
  - ☒ 2. गोद
  - ☒ 3. अंग
  - ☒ 4. नमक

Q.6 निम्न में से किस वाक्य में कारक चिह्न का अशुद्ध प्रयोग हुआ है?

- Ans
- ☒ 1. दूधवाला ग्राहकों को दूध दे रहा था।
  - ☒ 2. माँ बच्चे को खाना खिला रही थी।
  - ☒ 3. अध्यापक शरारती बच्चों को दंड दे रहे हैं।
  - ☒ 4. अध्यापक ने छात्रों को कॉपी को लिखवाया।

Q.7 'आज सड़क पर एक बड़ा \_\_\_\_\_।'

उपयुक्त विदेशज शब्द युक्त विकल्प से वाक्य पूर्ण करें -

- Ans
- ☒ 1. प्याऊ लगा था
  - ☒ 2. भालू दिखाई दिया
  - ☒ 3. जुलूस निकल रहा था
  - ☒ 4. कार्यक्रम था

Q.8 निम्नलिखित वाक्यांश के लिए उपयुक्त सार्थक शब्द है:

जिसके विषय में जानकारी न हो

- Ans
- ☒ 1. ज्ञान
  - ☒ 2. जानना
  - ☒ 3. पता नहीं
  - ☒ 4. अज्ञात

Q.9 कहा जाता है कि यदि कोई व्यक्ति अच्छे कर्म करता है, तो वह दीर्घायु होता है।  
वाक्य में दीर्घायु का विपरीतार्थक शब्द है?

- Ans
- ☒ 1. बहिरंग
  - ☒ 2. उदय
  - ☒ 3. बहुज्ञ
  - ☒ 4. अल्पायु

Q.10 निम्नलिखित मुहावरे का उचित अर्थ लिखें।  
अंगूठा दिखाना

- Ans
- ☒ 1. निशान लगाना
  - ☒ 2. अनपढ़
  - ☒ 3. जाहिल
  - ☒ 4. इनकार करना

Q.11 'रात्रि' का पर्याय निम्न में से है-

- Ans
- ☒ 1. नन्दिनि
  - ☒ 2. शिलीमुख
  - ☒ 3. विभावरी
  - ☒ 4. धरित्री

Q.12 'जिसे सभी बातों का ज्ञान हो' वाक्यांश के लिए उपयुक्त शब्द होगा-

- Ans
- ☒ 1. विशेषज्ञ
  - ☒ 2. त्रिकालदर्शी
  - ☒ 3. मर्मज्ञ
  - ☒ 4. सर्वज्ञ

Q.13 रिक्त स्थान की पूर्ति विदेशी शब्द से करें-  
मोहन के जाते ही \_\_\_\_\_ में कार्रवाई शुरू हो गई।

- Ans
- ☒ 1. अदालत
  - ☒ 2. न्यायालय
  - ☒ 3. सभागार
  - ☒ 4. सभा

Q.14 इस कार्य के परिणामस्वरूप मुझे \_\_\_\_\_ लाभ हुआ है।'  
'अर्पण शब्द का क्या \_\_\_\_\_ है?'

उपर्युक्त वाक्यों में रिक्त स्थान की पूर्ति के लिए उपयुक्त अनेकार्थी शब्द है -

- Ans
- ☒ 1. मतलब
  - ☒ 2. बहुत
  - ☒ 3. अधिक
  - ☒ 4. अर्थ

Q.15 निम्नलिखित में से किस वाक्य में लिंग की अशुद्धि है?

- Ans
- ☒ 1. दही रखी है, खा लो।
  - ☒ 2. रायता बहुत स्वादिष्ट लग रहा है।
  - ☒ 3. हलवा बन रहा है।
  - ☒ 4. आज टमाटर और आलू की सब्जी बनी है।

### Comprehension:

गद्यांश के आधार पर प्रश्न का उत्तर दें।

व्यक्तित्व के विकास और इसकी प्रखरता के लिए (1) \_\_\_\_\_ सोच जरूरी है। यह सफलता की भी (2) \_\_\_\_\_ होती है। सकारात्मक सोच को (3) \_\_\_\_\_ का हिस्सा कैसे बनाया जाए, प्रतियोगी छात्रों के लिए यह समझ लेना अत्यंत आवश्यक है। हममें से अधिकांश लोगों की आदत होती है कि वे या तो अपने आने वाले कल को लेकर चिंतित रहते हैं या भूतकाल के (4) \_\_\_\_\_ में उलझे रहते हैं। अपने वर्तमान से (5) \_\_\_\_\_ रहकर भविष्य और भूत में उलझना बिलकुल उचित नहीं होता है।

### SubQuestion No : 16

Q.16 उचित शब्द चुनकर गद्यांश में रिक्त स्थान (1) की पूर्ति करें-

- Ans
- ☒ 1. भावात्मक
  - ☒ 2. नकारात्मक
  - ☒ 3. सकारात्मक
  - ☒ 4. तठस्थ

**Comprehension:**

गद्यांश के आधार पर प्रश्न का उत्तर दें।

व्यक्तित्व के विकास और इसकी प्रखरता के लिए (1)\_\_\_\_\_ सोच जरूरी है। यह सफलता की भी (2)\_\_\_\_\_ होती है। सकारात्मक सोच को (3)\_\_\_\_\_ का हिस्सा कैसे बनाया जाए, प्रतियोगी छात्रों के लिए यह समझ लेना अत्यंत आवश्यक है। हममें से अधिकांश लोगों की आदत होती है कि वे या तो अपने आने वाले कल को लेकर चिंतित रहते हैं या भूतकाल के (4)\_\_\_\_\_ में उलझे रहते हैं। अपने वर्तमान से (5)\_\_\_\_\_ रहकर भविष्य और भूत में उलझना बिलकुल उचित नहीं होता है।

**SubQuestion No : 17**

**Q.17** उचित शब्द चुनकर गद्यांश में रिक्त स्थान (2) की पूर्ति करें-

- Ans**
- ☒ 1. कसौटी
  - ☒ 2. कुंजी
  - ☒ 3. सामर्थ्य
  - ☒ 4. पूँजी

**Comprehension:**

गद्यांश के आधार पर प्रश्न का उत्तर दें।

व्यक्तित्व के विकास और इसकी प्रखरता के लिए (1)\_\_\_\_\_ सोच जरूरी है। यह सफलता की भी (2)\_\_\_\_\_ होती है। सकारात्मक सोच को (3)\_\_\_\_\_ का हिस्सा कैसे बनाया जाए, प्रतियोगी छात्रों के लिए यह समझ लेना अत्यंत आवश्यक है। हममें से अधिकांश लोगों की आदत होती है कि वे या तो अपने आने वाले कल को लेकर चिंतित रहते हैं या भूतकाल के (4)\_\_\_\_\_ में उलझे रहते हैं। अपने वर्तमान से (5)\_\_\_\_\_ रहकर भविष्य और भूत में उलझना बिलकुल उचित नहीं होता है।

**SubQuestion No : 18**

**Q.18** उचित शब्द चुनकर गद्यांश में रिक्त स्थान (3) की पूर्ति करें-

- Ans**
- ☒ 1. समाज
  - ☒ 2. व्यक्तित्व
  - ☒ 3. मानवता
  - ☒ 4. महत्वाकांक्षा

**Comprehension:**

गद्यांश के आधार पर प्रश्न का उत्तर दें।

व्यक्तित्व के विकास और इसकी प्रखरता के लिए (1)\_\_\_\_\_ सोच जरूरी है। यह सफलता की भी (2)\_\_\_\_\_ होती है। सकारात्मक सोच को (3)\_\_\_\_\_ का हिस्सा कैसे बनाया जाए, प्रतियोगी छात्रों के लिए यह समझ लेना अत्यंत आवश्यक है। हममें से अधिकांश लोगों की आदत होती है कि वे या तो अपने आने वाले कल को लेकर चिंतित रहते हैं या भूतकाल के (4)\_\_\_\_\_ में उलझे रहते हैं। अपने वर्तमान से (5)\_\_\_\_\_ रहकर भविष्य और भूत में उलझना बिलकुल उचित नहीं होता है।

**SubQuestion No : 19**

**Q.19** उचित शब्द चुनकर गद्यांश में रिक्त स्थान (4) की पूर्ति करें-

- Ans**
- ☒ 1. आचरणों
  - ☒ 2. समीकरणों
  - ☒ 3. संस्कारों
  - ☒ 4. उपलब्धियों

**Comprehension:**

गद्यांश के आधार पर प्रश्न का उत्तर दें।

व्यक्तित्व के विकास और इसकी प्रखरता के लिए (1)\_\_\_\_\_ सोच जरूरी है। यह सफलता की भी (2)\_\_\_\_\_ होती है। सकारात्मक सोच को (3)\_\_\_\_\_ का हिस्सा कैसे बनाया जाए, प्रतियोगी छात्रों के लिए यह समझ लेना अत्यंत आवश्यक है। हममें से अधिकांश लोगों की आदत होती है कि वे या तो अपने आने वाले कल को लेकर चिंतित रहते हैं या भूतकाल के (4)\_\_\_\_\_ में उलझे रहते हैं। अपने वर्तमान से (5)\_\_\_\_\_ रहकर भविष्य और भूत में उलझना बिलकुल उचित नहीं होता है।

**SubQuestion No : 20**

**Q.20** उचित शब्द चुनकर गद्यांश में रिक्त स्थान (5) की पूर्ति करें-

- Ans**
- ☒ 1. विमुख
  - ☒ 2. संतुष्ट
  - ☒ 3. सन्मुख
  - ☒ 4. भयभीत