

## Constable Executive Male and Female in Delhi Police Examination 2023

Roll Number	
Candidate Name	
Venue Name	
Exam Date	30/11/2023
Exam Time	9:00 AM - 10:30 AM
Subject	Constable Executive Male and Female in Delhi Police Examination 2023

### Section : General Knowledge

**Q.1** Annapurna Finance Private Limited had its origin as a not-for-profit company called \_\_\_\_\_, an NGO that helped poor women in Odisha.

- Ans** ☒ 1. Alternative for Rural Movement  
☒ 2. Peoples Forum  
☒ 3. All India Development Trust  
☒ 4. Action for Rural Transformation

Question ID : 264330116495

Option 1 ID : 264330458066

Option 2 ID : 264330458067

Option 3 ID : 264330458065

Option 4 ID : 264330458068

Status : Marked For Review

Chosen Option : 3

**Q.2** Hanukkah is a \_\_\_\_\_ festival.

- Ans** ☒ 1. Jain  
☒ 2. Jewish  
☒ 3. Sikh  
☒ 4. Buddhist

Question ID : 264330109313

Option 1 ID : 264330429529

Option 2 ID : 264330429530

Option 3 ID : 264330429532

Option 4 ID : 264330429531

Status : Not Answered

Chosen Option : --

**Q.3** In which year did Mihir Sen create history by being the only man to swim the five oceans in one calendar year?

- Ans** ☒ 1. 1958  
☒ 2. 1966  
☒ 3. 1949  
☒ 4. 1950

Question ID : 264330119276

Option 1 ID : 264330467392

Option 2 ID : 264330467391

Option 3 ID : 264330467393

Option 4 ID : 264330467394

Status : Not Answered

Chosen Option : --

# Test Prime

**ALL EXAMS,  
ONE SUBSCRIPTION**



**70,000+**  
Mock Tests



**Personalised  
Report Card**



**Unlimited  
Re-Attempt**



**600+**  
Exam Covered



**Previous Year  
Papers**



**500%  
Refund**



**ATTEMPT FREE MOCK NOW**

Q.4 Match the diseases in group I with the modes of transmission in group II.

Group I		Group II	
(a)	Meningitis	(i)	inoculation into skin or mucosa
(b)	Rabies	(ii)	contaminated food or water
(c)	Typhoid	(iii)	contact with soil
(d)	Tetanus	(iv)	droplet infection

- Ans ☒ 1. (a)-(iv), (b)-(i), (c)-(iii), (d)-(ii)  
☒ 2. (a)-(i), (b)-(iv), (c)-(ii), (d)-(iii)  
☒ 3. (a)-(ii), (b)-(i), (c)-(iv), (d)-(iii)  
☒ 4. (a)-(iv), (b)-(i), (c)-(ii), (d)-(iii)

Question ID : 264330182449

Option 1 ID : 264330715598

Option 2 ID : 264330715595

Option 3 ID : 264330715596

Option 4 ID : 264330715597

Status : Answered

Chosen Option : 4

Q.5 Which edition of the FIFA U-17 Women's World Cup was hosted by India in 2022?

- Ans ☒ 1. Fifth  
☒ 2. Sixth  
☒ 3. Fourth  
☒ 4. Seventh

Question ID : 264330113733

Option 1 ID : 264330447019

Option 2 ID : 264330447017

Option 3 ID : 264330447020

Option 4 ID : 264330447018

Status : Marked For Review

Chosen Option : 2

Q.6 According to Planning commission of India (2011-12), which group of states has the highest poverty ratio?

- Ans ☒ 1. Maharashtra and Gujarat  
☒ 2. Madhya Pradesh and Uttar Pradesh  
☒ 3. Chhattisgarh and Jharkhand  
☒ 4. Punjab and Haryana

Question ID : 264330119915

Option 1 ID : 264330469937

Option 2 ID : 264330469935

Option 3 ID : 264330469938

Option 4 ID : 264330469936

Status : Answered

Chosen Option : 3

Q.7 When did the Pro Wrestling League start in India?

Ans ☒ 1. 2015

☒ 2. 2017

☒ 3. 2010

☒ 4. 2014

Question ID : 264330176079

Option 1 ID : 264330690612

Option 2 ID : 264330690613

Option 3 ID : 264330690614

Option 4 ID : 264330690611

Status : Not Answered

Chosen Option : --

Q.8 The Ramakrishna Mission was founded by \_\_\_\_\_ to regenerate Indian society by promoting the Vedanta philosophy.

Ans ☒ 1. Swami Vivekananda

☒ 2. Swami Dayananda Saraswati

☒ 3. Debendranath Tagore

☒ 4. Raja Ram Mohan Roy

Question ID : 264330112402

Option 1 ID : 264330441693

Option 2 ID : 264330441695

Option 3 ID : 264330441694

Option 4 ID : 264330441696

Status : Answered

Chosen Option : 2

Q.9 'Koman' and 'Kuruwa' are the names of \_\_\_\_\_ in India.

Ans ☒ 1. peaks of Western Ghats

☒ 2. artificial lakes

☒ 3. tribes of Himalaya

☒ 4. slash and burn agriculture

Question ID : 264330120311

Option 1 ID : 264330471498

Option 2 ID : 264330471497

Option 3 ID : 264330471496

Option 4 ID : 264330471495

Status : Marked For Review

Chosen Option : 3

Q.10 In which of the following sessions did the Indian National Congress decide to boycott the Simon Commission?

Ans ☒ 1. Poona session

☒ 2. Madras session

☒ 3. Bombay session

☒ 4. Allahabad session

Question ID : 264330117807

Option 1 ID : 264330463045

Option 2 ID : 264330463043

Option 3 ID : 264330463044

Option 4 ID : 264330463046

Status : Not Attempted and  
Marked For Review

Chosen Option : --

Q.11 In 1991, India met with an economic crisis where the \_\_\_\_\_ reserves fell so low that they were not sufficient for even a \_\_\_\_\_.

- Ans
- ☒ 1. foreign exchange; quarter
  - ☒ 2. gold; month
  - ☒ 3. gold; year
  - ☒ 4. foreign exchange; fortnight

Question ID : 264330109129  
Option 1 ID : 264330428793  
Option 2 ID : 264330428794  
Option 3 ID : 264330428796  
Option 4 ID : 264330428795  
Status : Answered  
Chosen Option : 1

Q.12 Kailasa temple is made up of which of the following types of rock?

- Ans
- ☒ 1. Basalt
  - ☒ 2. Granite
  - ☒ 3. Marble
  - ☒ 4. Pumice

Question ID : 264330106251  
Option 1 ID : 264330417306  
Option 2 ID : 264330417307  
Option 3 ID : 264330417308  
Option 4 ID : 264330417305  
Status : Not Answered  
Chosen Option : --

Q.13 Suppose a person has four acres of land in India, and he actually needs only two workers and himself to carry out various operations on his farm in a year, but if he employs five workers and his family members such as his wife and children", this situation known as \_\_\_\_\_.

- Ans
- ☒ 1. Transitional Unemployment
  - ☒ 2. Open Unemployment
  - ☒ 3. Seasonal Unemployment
  - ☒ 4. Disguised Unemployment

Question ID : 264330119824  
Option 1 ID : 264330469573  
Option 2 ID : 264330469574  
Option 3 ID : 264330469571  
Option 4 ID : 264330469572  
Status : Not Answered  
Chosen Option : --

Q.14 The horizontal distance between two adjacent crests or troughs is known as the \_\_\_\_\_.

- Ans
- ☒ 1. wave speed
  - ☒ 2. wave frequency
  - ☒ 3. wave period
  - ☒ 4. wave length

Question ID : 264330118521  
 Option 1 ID : 264330465485  
 Option 2 ID : 264330465488  
 Option 3 ID : 264330465486  
 Option 4 ID : 264330465487  
 Status : Not Answered  
 Chosen Option : --

Q.15 Fundamental duties were first added by which Constitutional Amendment Act?

- Ans
- ☒ 1. 48<sup>th</sup> Constitutional Amendment Act
  - ☒ 2. 46<sup>th</sup> Constitutional Amendment Act
  - ☒ 3. 42<sup>nd</sup> Constitutional Amendment Act
  - ☒ 4. 44<sup>th</sup> Constitutional Amendment Act

Question ID : 264330111517  
 Option 1 ID : 264330438156  
 Option 2 ID : 264330438155  
 Option 3 ID : 264330438153  
 Option 4 ID : 264330438154  
 Status : Answered  
 Chosen Option : 3

Q.16 How many of the main fixed instruments can be found in the Jantar Mantar, Jaipur?

- Ans
- ☒ 1. 25
  - ☒ 2. 17
  - ☒ 3. 20
  - ☒ 4. 15

Question ID : 26433090745  
 Option 1 ID : 264330356403  
 Option 2 ID : 264330356402  
 Option 3 ID : 264330356404  
 Option 4 ID : 264330356401  
 Status : Not Answered  
 Chosen Option : --

Q.17 Which of the following were NOT part of the comprehensive liberalisation reforms introduced in July 1991?

- Ans
- ☒ 1. Disinvestment and public enterprise reforms
  - ☒ 2. Demographic reforms
  - ☒ 3. Financial sector reforms
  - ☒ 4. Trade and capital flow reforms

Question ID : 264330120212  
 Option 1 ID : 264330471106  
 Option 2 ID : 264330471105  
 Option 3 ID : 264330471104  
 Option 4 ID : 264330471103  
 Status : Not Answered  
 Chosen Option : --

Q.18 The inscription in Sanskrit, recording the repairing of the Mauryan dam at Junagarh belonged to whom among the following?

- Ans ☒ 1. Gautamiputra Satakarni  
☒ 2. Menander  
☒ 3. Kanishka  
☒ 4. Rudradaman

Question ID : 264330120283  
Option 1 ID : 264330471385  
Option 2 ID : 264330471386  
Option 3 ID : 264330471383  
Option 4 ID : 264330471384  
Status : Not Answered  
Chosen Option : --

Q.19 Who among the following published the book 'Stripurushtulna', criticising the social differences between men and women?

- Ans ☒ 1. Tarabai Shinde  
☒ 2. Pandita Ramabai  
☒ 3. Ishwar Chandra Vidyasagar  
☒ 4. Vijaya Laxmi Pandit

Question ID : 264330119022  
Option 1 ID : 264330466745  
Option 2 ID : 264330466743  
Option 3 ID : 264330466746  
Option 4 ID : 264330466744  
Status : Not Answered  
Chosen Option : --

Q.20 Which of the following rivers is also known as 'Dakshin Ganga'?

- Ans ☒ 1. Bhargavi River  
☒ 2. Mahanadi River  
☒ 3. Pranhita River  
☒ 4. Godavari River

Question ID : 264330178011  
Option 1 ID : 264330698121  
Option 2 ID : 264330698120  
Option 3 ID : 264330698122  
Option 4 ID : 264330698119  
Status : Answered  
Chosen Option : 4

**Q.21** Which Article of the Indian Constitution restricts and prohibits religious instructions in the educational institutions which are maintained by the Government and funded by the government?

- Ans**
- ☒ 1. Article 29
  - ☒ 2. Article 25
  - ☒ 3. Article 23
  - ☒ 4. Article 28

Question ID : 264330119681  
 Option 1 ID : 264330469002  
 Option 2 ID : 264330469000  
 Option 3 ID : 264330468999  
 Option 4 ID : 264330469001  
 Status : Answered  
 Chosen Option : 2

**Q.22** Which of the following Articles of the Indian Constitution is related with equal justice and free legal aid?

- Ans**
- ☒ 1. Article 39 A
  - ☒ 2. Article 48 A
  - ☒ 3. Article 51 A
  - ☒ 4. Article 43 A

Question ID : 264330180055  
 Option 1 ID : 264330706203  
 Option 2 ID : 264330706205  
 Option 3 ID : 264330706206  
 Option 4 ID : 264330706204  
 Status : Answered  
 Chosen Option : 4

**Q.23** In an economy, if the gross national product at factor cost is ₹10,000 crores, depreciation is ₹250 crores, the net factor income from abroad is ₹500 crores, what is the value of national income?

- Ans**
- ☒ 1. ₹10,750 crores
  - ☒ 2. ₹9,250 crores
  - ☒ 3. ₹10,250 crores
  - ☒ 4. ₹9,750 crores

Question ID : 264330117976  
 Option 1 ID : 264330463719  
 Option 2 ID : 264330463722  
 Option 3 ID : 264330463720  
 Option 4 ID : 264330463721  
 Status : Answered  
 Chosen Option : 3



Q.24 From which country is the legislative procedure in the Indian Constitution taken from?

- Ans
- ☐ 1. Australia
  - ☐ 2. Ireland
  - ☐ 3. Japan
  - ☒ 4. United Kingdom

Question ID : 264330183146  
 Option 1 ID : 264330718316  
 Option 2 ID : 264330718318  
 Option 3 ID : 264330718317  
 Option 4 ID : 264330718319  
 Status : Answered  
 Chosen Option : 4

Q.25 Which of the following countries is the winner of the FIFA Football World Cup 2022?

- Ans
- ☒ 1. Argentina
  - ☐ 2. Brazil
  - ☐ 3. England
  - ☐ 4. Japan

Question ID : 264330130622  
 Option 1 ID : 264330511600  
 Option 2 ID : 264330511599  
 Option 3 ID : 264330511602  
 Option 4 ID : 264330511601  
 Status : Answered  
 Chosen Option : 1

Q.26 The jurisdiction of the Supreme Court is guaranteed by the:

- Ans
- ☐ 1. Chief Justice
  - ☒ 2. Constitution
  - ☐ 3. President
  - ☐ 4. Parliament

Question ID : 264330173525  
 Option 1 ID : 264330680581  
 Option 2 ID : 264330680579  
 Option 3 ID : 264330680582  
 Option 4 ID : 264330680580  
 Status : Answered  
 Chosen Option : 1

Q.27 The capital of Satakarni I of the Satavahanas was \_\_\_\_\_.

- Ans
- ☐ 1. Anahilapura
  - ☐ 2. Prabhas Patan
  - ☐ 3. Anahilapatan
  - ☒ 4. Pratisthana

Question ID : 264330120139  
 Option 1 ID : 264330470813  
 Option 2 ID : 264330470811  
 Option 3 ID : 264330470814  
 Option 4 ID : 264330470812  
 Status : Not Answered  
 Chosen Option : --

Q.28 Majority of India's foreign trade is carried out by which means of transportation?

- Ans ☒ 1. Road transportation  
☒ 2. Sea transportation  
☒ 3. Rail transportation  
☒ 4. Air transportation

Question ID : 264330120317  
 Option 1 ID : 264330471522  
 Option 2 ID : 264330471521  
 Option 3 ID : 264330471519  
 Option 4 ID : 264330471520  
 Status : Answered  
 Chosen Option : 2

Q.29 Who among the following, as Indian slide instrumentalist, vocalist and composer, initiated the Planet Symphony Orchestra in 2019?

- Ans ☒ 1. Mohan Kannon  
☒ 2. Rahul Ram  
☒ 3. Abhay Jodhpurkar  
☒ 4. Narasimhan Ravikiran

Question ID : 264330111959  
 Option 1 ID : 264330439923  
 Option 2 ID : 264330439924  
 Option 3 ID : 264330439921  
 Option 4 ID : 264330439922  
 Status : Not Answered  
 Chosen Option : --

Q.30 Bhagat Singh and \_\_\_\_\_ threw a bomb in the Central Legislative Assembly on 8 April 1929.

- Ans ☒ 1. Jaidev Kapoor  
☒ 2. Batukeshwar Dutt  
☒ 3. Sukhdev Thapar  
☒ 4. Shivaram Rajguru

Question ID : 264330114112  
 Option 1 ID : 264330448536  
 Option 2 ID : 264330448535  
 Option 3 ID : 264330448533  
 Option 4 ID : 264330448534  
 Status : Answered  
 Chosen Option : 3

Q.31 On which of the following matters of the State List can Delhi's Legislature make laws?

- Ans ☒ 1. Police  
☒ 2. Public order  
☒ 3. Land  
☒ 4. Health

Question ID : 264330120199  
 Option 1 ID : 264330471053  
 Option 2 ID : 264330471051  
 Option 3 ID : 264330471054  
 Option 4 ID : 264330471052  
 Status : Answered  
 Chosen Option : 4

Q.32 Which festival is celebrated to commemorate the birth anniversary of Lord Buddha?

- Ans ☒ 1. Parinirvana Day  
☒ 2. Vesak  
☒ 3. Ullambana  
☒ 4. Kathina

Question ID : 264330118490  
 Option 1 ID : 264330465362  
 Option 2 ID : 264330465361  
 Option 3 ID : 264330465363  
 Option 4 ID : 264330465364  
 Status : Marked For Review  
 Chosen Option : 1

Q.33 Lai Haraoba, which literally means 'the festival of gods', is primarily celebrated in which state of India?

- Ans ☒ 1. Kerala  
☒ 2. Uttarakhand  
☒ 3. Himachal Pradesh  
☒ 4. Manipur

Question ID : 264330111789  
 Option 1 ID : 264330439241  
 Option 2 ID : 264330439244  
 Option 3 ID : 264330439243  
 Option 4 ID : 264330439242  
 Status : Answered  
 Chosen Option : 4

Q.34 Which of the following is the function of trade barriers?

- Ans ☒ 1. Restrict the flow of international goods and services  
☒ 2. Restrict the flow of Indian goods and services in India  
☒ 3. Ban making goods  
☒ 4. Restrict packed goods

Question ID : 264330117794  
 Option 1 ID : 264330462991  
 Option 2 ID : 264330462992  
 Option 3 ID : 264330462993  
 Option 4 ID : 264330462994  
 Status : Not Answered  
 Chosen Option : --

Q.35 Which of the following is known as the power house of cells?

- Ans ☒ 1. Nucleus  
☒ 2. Ribosomes  
☒ 3. Mitochondria  
☒ 4. Cytoplasm

Question ID : 264330117603  
 Option 1 ID : 264330462439  
 Option 2 ID : 264330462438  
 Option 3 ID : 264330462437  
 Option 4 ID : 264330462440  
 Status : Answered  
 Chosen Option : 3

Q.36 In the context of globalisation, FDI is an important term. What does the I stand for in FDI?

- Ans
- ☒ 1. Investor
  - ☒ 2. International
  - ☒ 3. Interest
  - ☒ 4. Investment

Question ID : 264330109405  
 Option 1 ID : 264330429900  
 Option 2 ID : 264330429898  
 Option 3 ID : 264330429897  
 Option 4 ID : 264330429899  
 Status : Answered  
 Chosen Option : 4

Q.37 Bhajan Sopori is associated with which of the following instruments?

- Ans
- ☒ 1. Violin
  - ☒ 2. Santoor
  - ☒ 3. Sarod
  - ☒ 4. Been

Question ID : 264330111944  
 Option 1 ID : 264330439861  
 Option 2 ID : 264330439863  
 Option 3 ID : 264330439862  
 Option 4 ID : 264330439864  
 Status : Not Answered  
 Chosen Option : --

Q.38 Who among the following wrote 'Nirmala'?

- Ans
- ☒ 1. Munshi Premchand
  - ☒ 2. Jaishankar Prasad
  - ☒ 3. Shrilal Shukla
  - ☒ 4. Ramdhari Singh

Question ID : 26433086912  
 Option 1 ID : 264330341291  
 Option 2 ID : 264330341289  
 Option 3 ID : 264330341292  
 Option 4 ID : 264330341290  
 Status : Not Answered  
 Chosen Option : --

Q.39 Which form of dance does Kumudini Lakhia perform?

- Ans
- ☒ 1. Manipuri
  - ☒ 2. Bharatanatyam
  - ☒ 3. Kathakali
  - ☒ 4. Kathak

Question ID : 26433086933  
 Option 1 ID : 264330341373  
 Option 2 ID : 264330341376  
 Option 3 ID : 264330341374  
 Option 4 ID : 264330341375  
 Status : Not Answered  
 Chosen Option : --

Q.40 Which of the following statements about water resource is correct?

- Ans ☒ 1. Water is a cyclic resource.
- ☐ 2. Water is a biotic resource.
- ☐ 3. Water is a non-renewable resource.
- ☐ 4. Water is both, biotic and abiotic resource.

Question ID : 264330138013  
Option 1 ID : 264330540662  
Option 2 ID : 264330540659  
Option 3 ID : 264330540661  
Option 4 ID : 264330540660  
Status : Not Answered  
Chosen Option : --

Q.41 Veeranatyam is an ancient form of dance from which of these states?

- Ans ☐ 1. Rajasthan
- ☒ 2. Andhra Pradesh
- ☐ 3. Uttar Pradesh
- ☐ 4. Punjab

Question ID : 264330109281  
Option 1 ID : 264330429401  
Option 2 ID : 264330429404  
Option 3 ID : 264330429402  
Option 4 ID : 264330429403  
Status : Answered  
Chosen Option : 2

Q.42 'The Story of My Experiments with Truth' is an autobiography of \_\_\_\_\_.

- Ans ☒ 1. Mahatma Gandhi
- ☐ 2. Sardar Vallabhbhai Patel
- ☐ 3. Jawaharlal Nehru
- ☐ 4. Bhimrao Ambedkar

Question ID : 26433054171  
Option 1 ID : 264330211669  
Option 2 ID : 264330211670  
Option 3 ID : 264330211668  
Option 4 ID : 264330211671  
Status : Answered  
Chosen Option : 1

Q.43 According to the 2011 Census, the literacy rate among females in India is \_\_\_\_\_ compared to males.

- Ans ☐ 1. unpredictable
- ☐ 2. equal
- ☒ 3. lower
- ☐ 4. higher

Question ID : 264330179275  
Option 1 ID : 264330703106  
Option 2 ID : 264330703105  
Option 3 ID : 264330703104  
Option 4 ID : 264330703103  
Status : Answered  
Chosen Option : 3

Q.44 Irregular growth of teeth is due to the deficiencies of vitamin \_\_\_\_.

- Ans
- ☒ 1. K
  - ☒ 2. A
  - ☒ 3. B
  - ☒ 4. D

Question ID : 264330120063  
 Option 1 ID : 264330470509  
 Option 2 ID : 264330470507  
 Option 3 ID : 264330470508  
 Option 4 ID : 264330470510  
 Status : Not Answered  
 Chosen Option : --

Q.45 Rashtrakuta ruler Dantidurga died without a male heir and was succeeded by his uncle\_\_\_\_\_.

- Ans
- ☒ 1. Amoghavarsha I
  - ☒ 2. Indra I
  - ☒ 3. Govinda I
  - ☒ 4. Krishna I

Question ID : 264330182259  
 Option 1 ID : 264330714861  
 Option 2 ID : 264330714860  
 Option 3 ID : 264330714859  
 Option 4 ID : 264330714862  
 Status : Not Answered  
 Chosen Option : --

Q.46 Which famous chemist refuted the theory of 'vitalism' by saying that organic substances can only be produced from living things?

- Ans
- ☒ 1. John Dalton
  - ☒ 2. Antoine Lavoisier
  - ☒ 3. Friedrich Wohler
  - ☒ 4. Marcellin Berthelot

Question ID : 264330177874  
 Option 1 ID : 264330697586  
 Option 2 ID : 264330697585  
 Option 3 ID : 264330697583  
 Option 4 ID : 264330697584  
 Status : Not Answered  
 Chosen Option : --

Q.47 With which of the following states is the 'Popir' dance associated?

- Ans
- ☒ 1. Arunachal Pradesh
  - ☒ 2. Madhya Pradesh
  - ☒ 3. Jharkhand
  - ☒ 4. Chhattisgarh

Question ID : 264330106193  
 Option 1 ID : 264330417073  
 Option 2 ID : 264330417075  
 Option 3 ID : 264330417074  
 Option 4 ID : 264330417076  
 Status : Answered  
 Chosen Option : 1

Q.48 The first Battle of Panipat was fought on 20 April 1526 between Babur and \_\_\_\_\_.

- Ans
- ☒ 1. Sikandar Lodi
  - ☒ 2. Mahmud Lodi
  - ☒ 3. Ibrahim Lodi
  - ☒ 4. Bahlul Lodi

Question ID : 264330113572  
 Option 1 ID : 264330446375  
 Option 2 ID : 264330446373  
 Option 3 ID : 264330446376  
 Option 4 ID : 264330446374  
 Status : Answered  
 Chosen Option : 3

Q.49 Who among the following has the power to make provision as he/she may think fit for the discharge of the functions of the Governor of a State in any contingency?

- Ans
- ☒ 1. Chief Justice of India
  - ☒ 2. President
  - ☒ 3. Prime Minister
  - ☒ 4. Chief Justice of the High Court

Question ID : 26433053627  
 Option 1 ID : 264330209811  
 Option 2 ID : 264330209810  
 Option 3 ID : 264330209813  
 Option 4 ID : 264330209812  
 Status : Answered  
 Chosen Option : 2

Q.50 From which Five-Year Plan period was the formulation and implementation of the Five-Year Plan discontinued by the Government of India?

- Ans
- ☒ 1. Twelfth Five-Year Plan
  - ☒ 2. Tenth Five-Year Plan
  - ☒ 3. Eleventh Five-Year Plan
  - ☒ 4. Ninth Five-Year Plan

Question ID : 264330111742  
 Option 1 ID : 264330439056  
 Option 2 ID : 264330439054  
 Option 3 ID : 264330439055  
 Option 4 ID : 264330439053  
 Status : Answered  
 Chosen Option : 1

Section : Reasoning

Q.1 16 is related to 24 following a certain logic. Following the same logic, 22 is related to 33. To which of the following is 36 related, following the same logic?  
(NOTE: Operations should be performed on the whole numbers, without breaking down the numbers into their constituent digits. E.g. 13 – Operations on 13 such as adding/subtracting/multiplying etc. to 13 can be performed. Breaking down 13 into 1 and 3 and then performing mathematical operations on 1 and 3 is not allowed.)

- Ans
- ☒ 1. 49
  - ☒ 2. 45
  - ☒ 3. 51
  - ☒ 4. 54

Question ID : 264330177413

Option 1 ID : 264330695824

Option 2 ID : 264330695825

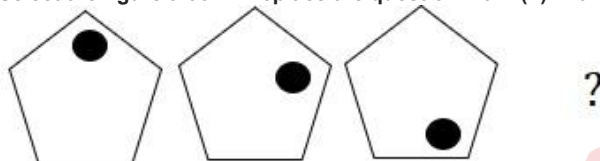
Option 3 ID : 264330695826

Option 4 ID : 264330695823

Status : Answered

Chosen Option : 4

Q.2 Select the figure that will replace the question mark (?) in the following figure series.



Ans

- ☒ 1.
- ☒ 2.
- ☒ 3.
- ☒ 4.

Question ID : 264330112030

Option 1 ID : 264330440207

Option 2 ID : 264330440205

Option 3 ID : 264330440206

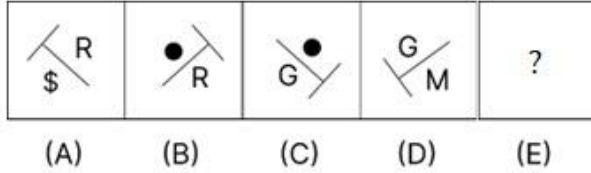
Option 4 ID : 264330440208

Status : Answered

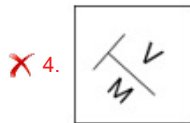
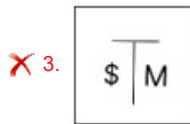
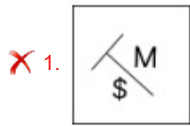
Chosen Option : 1



Q.3 Given below is a series of figures – A, B, C and D which follow a particular pattern. Which of the given option figures should come in place of E to continue the series?



Ans



Question ID : 264330111289

Option 1 ID : 264330437243

Option 2 ID : 264330437242

Option 3 ID : 264330437244

Option 4 ID : 264330437241

Status : Answered

Chosen Option : 2

Q.4 Two statements are given, followed by two conclusions numbered I and II. Assuming the statements to be true, even if they seem to be at variance with commonly known facts, decide which of the conclusions logically follow(s) from the statements.

Statements:

All houses are buildings.

Some houses are apartments.

Conclusions:

I. All buildings are houses.

II. Some buildings are apartments.

Ans ✗ 1. Both Conclusions I and II follow.

✗ 2. Neither Conclusion I nor II follows.

✗ 3. Only Conclusion I follows.

✓ 4. Only Conclusion II follows.

Question ID : 26433081677

Option 1 ID : 264330320543

Option 2 ID : 264330320544

Option 3 ID : 264330320541

Option 4 ID : 264330320542

Status : Answered

Chosen Option : 4

Q.5 Which figure should replace the question mark (?) if the following series were to be continued?

	♥		P		K		♥		I		
P	I	3	K	N	3	I	♥	♥	N	3	I
N				K			P	I			♥

Ans

✗ 1.

			♥
N	3	P	K
I			

✓ 2.

			K
♥	3	P	I
N			

✗ 3.

			♥
N	K	P	3
I			

✗ 4.

			N
♥	3	P	I
K			

Question ID : 264330103886

Option 1 ID : 264330407847

Option 2 ID : 264330407846

Option 3 ID : 264330407848

Option 4 ID : 264330407845

Status : Answered

Chosen Option : 2

Q.6 Which of the following option figures will complete the pattern in the figure given below?



Ans

✗ 1.



✗ 2.



✓ 3.



✗ 4.



Question ID : 26433080615

Option 1 ID : 264330316393

Option 2 ID : 264330316396

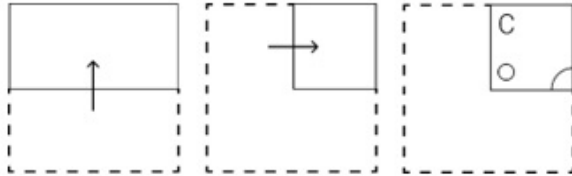
Option 3 ID : 264330316394

Option 4 ID : 264330316395

Status : Answered

Chosen Option : 3

Q.7 A paper is folded and cut as shown below. How will it appear when unfolded?



Ans

- ✗ 1.
- ✗ 2.
- ✗ 3.
- ✓ 4.

Question ID : 264330114712

Option 1 ID : 264330450934

Option 2 ID : 264330450933

Option 3 ID : 264330450935

Option 4 ID : 264330450936

Status : Answered

Chosen Option : 4

Q.8 If P denotes '×', Q denotes '÷', R denotes '+', and S denotes '-', then what will come in place of '?' in the following equation?

$$(7)^2 R (8 Q 2) P 13 R (63 Q 7) P 8 S 41 = ?$$

Ans ✗ 1. 136

✓ 2. 132

✗ 3. 140

✗ 4. 128

Question ID : 26433069207

Option 1 ID : 264330271343

Option 2 ID : 264330271340

Option 3 ID : 264330271341

Option 4 ID : 264330271342

Status : Answered

Chosen Option : 2

Q.9 Select the option that represents the letters that, when sequentially placed from left to right in the blanks below, will complete the letter series.

\_ L \_ O P H \_ N \_ P H L N \_ \_ H L \_ O \_

Ans ☒ 1. HNOLOPPN

☒ 2. NHLOPONP

☒ 3. NHOLOPPN

☒ 4. HNLOOPNP

Question ID : 26433095982

Option 1 ID : 264330376700

Option 2 ID : 264330376697

Option 3 ID : 264330376699

Option 4 ID : 264330376698

Status : Answered

Chosen Option : 4

Q.10 Select the figure from the options that can replace the question mark (?) and complete the given pattern.



Ans

☒ 1.



☒ 2.



☒ 3.



☒ 4.



Question ID : 26433082910

Option 1 ID : 264330325474

Option 2 ID : 264330325476

Option 3 ID : 264330325475

Option 4 ID : 264330325473

Status : Answered

Chosen Option : 4

Q.11 Select the correct combination of mathematical signs that can sequentially replace the \* signs and balance the given equation.  
 $6*12*3*8*3*35$

- Ans
- ☒ 1. +, -, x, +, =
  - ☒ 2. ÷, -, x, +, =
  - ☒ 3. +, ÷, x, -, =
  - ☒ 4. +, x, -, +, =

Question ID : 26433079093  
 Option 1 ID : 264330310379  
 Option 2 ID : 264330310377  
 Option 3 ID : 264330310378  
 Option 4 ID : 264330310376  
 Status : Answered  
 Chosen Option : 3

Q.12 Which of the following answer figures complete the pattern by replacing the question mark? (rotation is NOT allowed).



Ans

- ☒ 1.
- ☒ 2.
- ☒ 3.
- ☒ 4.

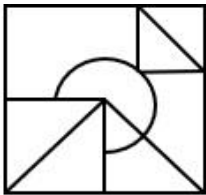
Question ID : 26433069252  
 Option 1 ID : 264330271523  
 Option 2 ID : 264330271522  
 Option 3 ID : 264330271521  
 Option 4 ID : 264330271520  
 Status : Answered  
 Chosen Option : 3

Q.13 The given figure is followed by four option figures. Select the option figure in which this figure is embedded (i.e., contains this figure in the same form; rotation is NOT allowed).

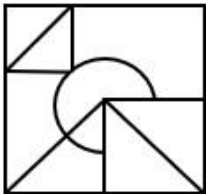


Ans

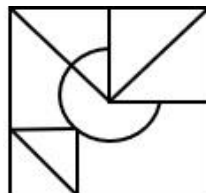
✗ 1.



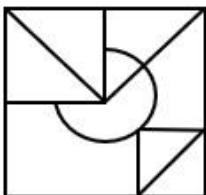
✗ 2.



✓ 3.



✗ 4.



Question ID : 264330121620

Option 1 ID : 264330476652

Option 2 ID : 264330476654

Option 3 ID : 264330476653

Option 4 ID : 264330476651

Status : Answered

Chosen Option : 3

Q.14 In a certain code language, 'JAM' is written as 'KCP' and 'MUG' is written as 'NWJ'. How will 'TEA' be written in that language?

Ans ✓ 1. UGD

✗ 2. UGC

✗ 3. UFB

✗ 4. UFC

Question ID : 26433087176

Option 1 ID : 264330342343

Option 2 ID : 264330342344

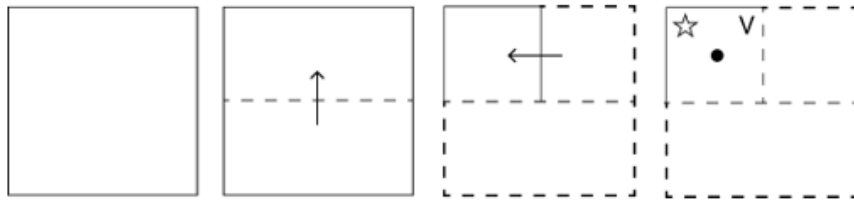
Option 3 ID : 264330342342

Option 4 ID : 264330342341

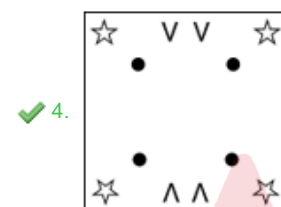
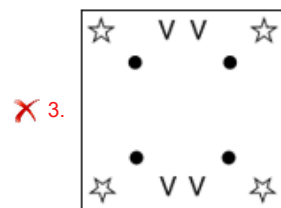
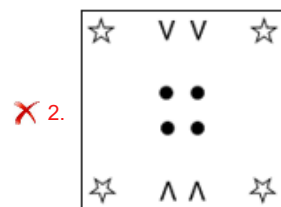
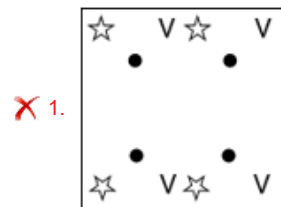
Status : Answered

Chosen Option : 1

Q.15 A square sheet of paper is folded along the dotted line successively along the directions shown and is then punched in the last. How would the paper look when unfolded?



Ans



Question ID : 264330172425

Option 1 ID : 264330676252

Option 2 ID : 264330676254

Option 3 ID : 264330676251

Option 4 ID : 264330676253

Status : Answered

Chosen Option : 4



Q.16 Seven kids, G, H, I, J, K, L and M, are sitting in a straight row facing north. Only two people sit to the right of H. Only three people sit between H and I. J sits to the immediate right of H and to the immediate left of G. K sits to the immediate right of L and is not a neighbour of H.  
Who sits second from the extreme left end of the row?

- Ans
- ☒ 1. I
  - ☒ 2. H
  - ☒ 3. K
  - ☒ 4. L

Question ID : 26433089504  
Option 1 ID : 264330351517  
Option 2 ID : 264330351520  
Option 3 ID : 264330351518  
Option 4 ID : 264330351519  
Status : Answered  
Chosen Option : 4

Q.17 Select the option that is related to the third word in the same way as the second word is related to the first word. (The words must be considered as meaningful English words and must NOT be related to each other based on the number of letters/number of consonants/vowels in the word)  
Hot : Summer :: Cold : ?

- Ans
- ☒ 1. Winter
  - ☒ 2. August
  - ☒ 3. April
  - ☒ 4. February

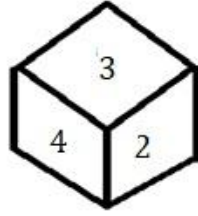
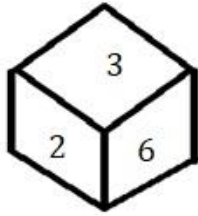
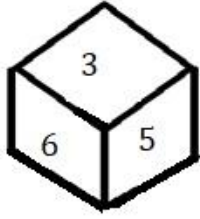
Question ID : 26433069139  
Option 1 ID : 264330271069  
Option 2 ID : 264330271071  
Option 3 ID : 264330271070  
Option 4 ID : 264330271068  
Status : Answered  
Chosen Option : 1

Q.18 Select the set in which the numbers are related in the same way as are the numbers of the following sets.  
(NOTE : Operations should be performed on the whole numbers, without breaking down the numbers into its constituent digits. E.g. 13 – Operations on 13 such as adding /deleting /multiplying etc. to 13 can be performed. Breaking down 13 into 1 and 3 and then performing mathematical operations on 1 and 3 is NOT allowed)  
(6, 48), (12, 168)

- Ans
- ☒ 1. (14, 224)
  - ☒ 2. (13, 182)
  - ☒ 3. (16, 278)
  - ☒ 4. (19, 342)

Question ID : 26433052041  
Option 1 ID : 264330203468  
Option 2 ID : 264330203466  
Option 3 ID : 264330203467  
Option 4 ID : 264330203469  
Status : Answered  
Chosen Option : 1

Q.19 Three different positions of the same dice are shown. Find the number on the face opposite the face having '1'.



- Ans
- ☒ 1. 6
  - ☒ 2. 3
  - ☒ 3. 4
  - ☒ 4. 2

Question ID : 264330118175

Option 1 ID : 264330464515

Option 2 ID : 264330464517

Option 3 ID : 264330464518

Option 4 ID : 264330464516

Status : Answered

Chosen Option : 2



Q.20 Which of the following option figures will complete the pattern in the figure given below?



Ans

✗ 1.



✗ 2.



✗ 3.



✓ 4.

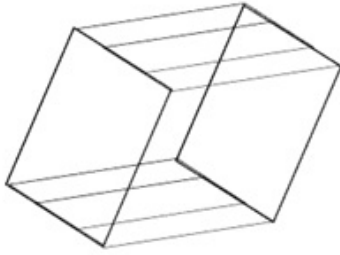


Question ID : 26433089620  
Option 1 ID : 264330351981  
Option 2 ID : 264330351983  
Option 3 ID : 264330351982  
Option 4 ID : 264330351984

Status : Answered

Chosen Option : 4

Q.21 How many triangles are there in the given figure?



Ans ☒ 1. 6

☐ 2. 4

☐ 3. 7

☐ 4. 5

Question ID : 26433085578

Option 1 ID : 264330336015

Option 2 ID : 264330336013

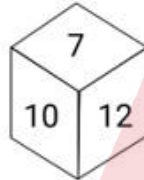
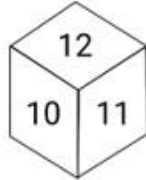
Option 3 ID : 264330336016

Option 4 ID : 264330336014

Status : Answered

Chosen Option : 1

Q.22 Six numbers, 7, 8, 9, 10, 11 and 12 are written on different faces of a dice. Three positions of this dice are shown here. Find the number on the face opposite 11.



Ans ☐ 1. 9

☐ 2. 10

☐ 3. 8

☒ 4. 7

Question ID : 264330106399

Option 1 ID : 264330417899

Option 2 ID : 264330417900

Option 3 ID : 264330417898

Option 4 ID : 264330417897

Status : Answered

Chosen Option : 4

Q.23 Which of the following options will replace the question mark (?) in the given series?  
47, 56.4, 67.68, 81.216, ?

Ans ☒ 1. 97.4592

☐ 2. 9.7632

☐ 3. 86.9544

☐ 4. 91.3462

Question ID : 264330109441

Option 1 ID : 264330430041

Option 2 ID : 264330430044

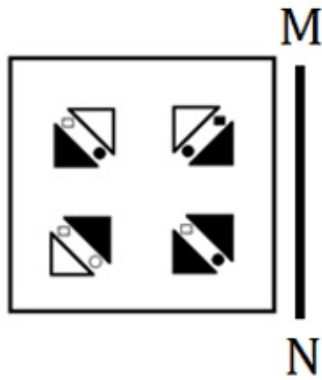
Option 3 ID : 264330430043

Option 4 ID : 264330430042

Status : Marked For Review

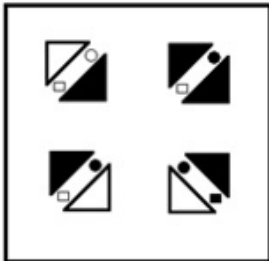
Chosen Option : 1

Q.24 Select the correct mirror image of the given combination when the mirror is placed at 'MN' as shown below.

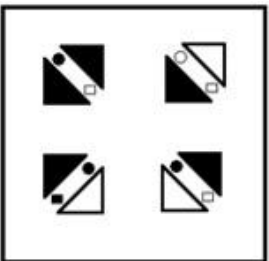


Ans


✗ 1.



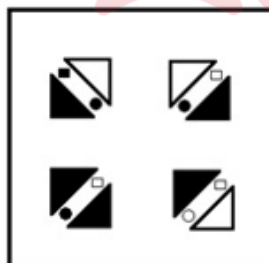
✗ 2.



✗ 3.



✓ 4.



Question ID : 264330112990

Option 1 ID : 264330444047

Option 2 ID : 264330444046

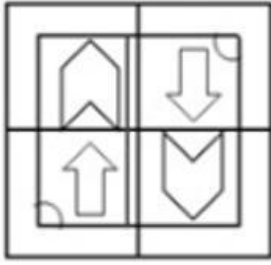
Option 3 ID : 264330444045

Option 4 ID : 264330444048

Status : Answered

Chosen Option : 4

Q.25 Select the option figure which is embedded in the given figure as its part (rotation is NOT allowed).



Ans

- ✗ 1.
- ✗ 2.
- ✗ 3.
- ✓ 4.

Question ID : 264330116995

Option 1 ID : 264330460063

Option 2 ID : 264330460062

Option 3 ID : 264330460061

Option 4 ID : 264330460064

Status : Answered

Chosen Option : 4

Section : Numerical Ability

Q.1 A sum of money was lent at 12.5% rate of yearly compound interest for three years. If the present value (i.e. after three years) of the sum of money is ₹13,851, then how much money (in ₹) was lent?

- Ans ✗ 1. 10000
- ✗ 2. 10278
- ✗ 3. 8728
- ✓ 4. 9728

Question ID : 264330108984

Option 1 ID : 264330428215

Option 2 ID : 264330428216

Option 3 ID : 264330428213

Option 4 ID : 264330428214

Status : Answered

Chosen Option : 4

Q.2 A, B and C can do a piece of work in 40, 60 and 120 days, respectively. In how many days can A do the work if he is assisted by B and C on every third day?

- Ans ☒ 1. 30  
☒ 2. 20  
☒ 3. 25  
☒ 4. 35

Question ID : 264330104222  
Option 1 ID : 264330409190  
Option 2 ID : 264330409189  
Option 3 ID : 264330409191  
Option 4 ID : 264330409192  
Status : Answered  
Chosen Option : 1

Q.3 The average of 7.012, 4.018, 6.012, 4.048, and 3.91, is:

- Ans ☒ 1. 3.5  
☒ 2. 7  
☒ 3. 5  
☒ 4. 4.5

Question ID : 264330168924  
Option 1 ID : 264330662499  
Option 2 ID : 264330662501  
Option 3 ID : 264330662500  
Option 4 ID : 264330662502  
Status : Answered  
Chosen Option : 3

Q.4 If  $184 \div 11.5 = 16$ , then  $1.84 \div 1.15$  is:

- Ans ☒ 1. 1.6  
☒ 2. 0.6  
☒ 3. 1.06  
☒ 4. 0.16

Question ID : 264330111437  
Option 1 ID : 264330437834  
Option 2 ID : 264330437833  
Option 3 ID : 264330437835  
Option 4 ID : 264330437836  
Status : Answered  
Chosen Option : 1

Q.5 Find the number of lead balls, each 2 cm in diameter, that can be made from a sphere of diameter 20 cm.

- Ans ☒ 1. 1000  
☒ 2. 150  
☒ 3. 1500  
☒ 4. 100

Question ID : 264330168564  
Option 1 ID : 264330661070  
Option 2 ID : 264330661067  
Option 3 ID : 264330661068  
Option 4 ID : 264330661069  
Status : Answered  
Chosen Option : 1

Q.6 If the diameter of a solid sphere is 28 cm, its hemisphere will have curved surface area (in  $\text{cm}^2$ ) of:

(Take  $\pi = \frac{22}{7}$ )

- Ans
- ☐ 1. 1731
  - ☐ 2. 1844
  - ☒ 3. 1232
  - ☐ 4. 1764

Question ID : 264330112433

Option 1 ID : 264330441818

Option 2 ID : 264330441817

Option 3 ID : 264330441820

Option 4 ID : 264330441819

Status : Answered

Chosen Option : 3

Q.7 In an election, there were three candidates: Ram, Ramesh and Ganesh. Ram received 48% votes and Ramesh received 36% votes. If the total number of votes polled was 40,000, find the number of votes received by Ganesh.

- Ans
- ☐ 1. 6900
  - ☐ 2. 7400
  - ☒ 3. 6400
  - ☐ 4. 7800

Question ID : 264330104289

Option 1 ID : 264330409459

Option 2 ID : 264330409458

Option 3 ID : 264330409457

Option 4 ID : 264330409460

Status : Answered

Chosen Option : 3

Q.8 A table is sold for ₹5,862 with 20% profit. The gain or loss percentage (to one decimal place) if it had been sold at ₹5,000, is:

- Ans
- ☐ 1. 1.5% loss
  - ☒ 2. 2.4% profit
  - ☐ 3. 2.3% loss
  - ☐ 4. 1.6% profit

Question ID : 264330106348

Option 1 ID : 264330417695

Option 2 ID : 264330417694

Option 3 ID : 264330417693

Option 4 ID : 264330417696

Status : Answered

Chosen Option : 3



Q.9 What is the principal on a certain sum of money at 5% per annum for  $2\frac{2}{5}$  years if the amount is ₹1,120?

- Ans ☒ 1. ₹1,000  
☒ 2. ₹5,000  
☒ 3. ₹500  
☒ 4. ₹2,000

Question ID : 264330182527

Option 1 ID : 264330715900

Option 2 ID : 264330715902

Option 3 ID : 264330715899

Option 4 ID : 264330715901

Status : Answered

Chosen Option : 1

Q.10 If  $x : y = 2 : 3$ ,  $y : z = 4 : 7$  and  $z : w = 7 : 3$ , then  $x : y : z : w$  is:

- Ans ☒ 1. 12 : 8 : 21 : 9  
☒ 2. 8 : 4 : 21 : 9  
☒ 3. 8 : 12 : 21 : 9  
☒ 4. 4 : 21 : 9 : 8

Question ID : 264330106076

Option 1 ID : 264330416608

Option 2 ID : 264330416605

Option 3 ID : 264330416606

Option 4 ID : 264330416607

Status : Answered

Chosen Option : 3

Q.11 Simplify  $\frac{7 \div (7 \times 7)}{(7 \div 7) \times 7}$ .

- Ans ☒ 1. 1  
☒ 2. 49  
☒ 3.  $\frac{1}{49}$   
☒ 4. 7

Question ID : 264330103919

Option 1 ID : 264330407978

Option 2 ID : 264330407980

Option 3 ID : 264330407979

Option 4 ID : 264330407977

Status : Answered

Chosen Option : 3

**Q.12** A person spends 80% of his income. His income increases by 30% and his expenditure also increases by 10%. By what percentage will his savings increase?

- Ans
- ☒ 1. 90%
  - ☒ 2. 110%
  - ☒ 3. 104%
  - ☒ 4. 98%

Question ID : 264330129402  
 Option 1 ID : 264330506974  
 Option 2 ID : 264330506977  
 Option 3 ID : 264330506976  
 Option 4 ID : 264330506975  
 Status : Answered  
 Chosen Option : 2

**Q.13** Ramesh sells an article at a discount of 15% of the marked price and he gains 25%. If the marked price of the article is ₹7,600, then the cost price of the article is:

- Ans
- ☒ 1. ₹5,168
  - ☒ 2. ₹5,188
  - ☒ 3. ₹5,178
  - ☒ 4. ₹5,198

Question ID : 264330179637  
 Option 1 ID : 264330704543  
 Option 2 ID : 264330704546  
 Option 3 ID : 264330704544  
 Option 4 ID : 264330704545  
 Status : Marked For Review  
 Chosen Option : 1

**Q.14** The number of all prime numbers less than 40 is:

- Ans
- ☒ 1. 12
  - ☒ 2. 13
  - ☒ 3. 11
  - ☒ 4. 10

Question ID : 264330104477  
 Option 1 ID : 264330410210  
 Option 2 ID : 264330410211  
 Option 3 ID : 264330410209  
 Option 4 ID : 264330410212  
 Status : Answered  
 Chosen Option : 2

**Q.15** A missile travels at 1152 km/h. How much distance (in m) does it travel in one second?

- Ans
- ☒ 1. 380
  - ☒ 2. 320
  - ☒ 3. 340
  - ☒ 4. 360

Question ID : 264330122988  
 Option 1 ID : 264330482016  
 Option 2 ID : 264330482017  
 Option 3 ID : 264330482015  
 Option 4 ID : 264330482018  
 Status : Answered  
 Chosen Option : 2

Section : Computer Proficiency

**Q.1** Which of the following types of networking is used to connect all the computers within a school or within an office?

- Ans**
- ☒ 1. Metropolitan Area Network
  - ☒ 2. Personal Area Network
  - ☒ 3. Wide Area Network
  - ☒ 4. Local Area Network

Question ID : 264330178245

Option 1 ID : 264330699037

Option 2 ID : 264330699038

Option 3 ID : 264330699036

Option 4 ID : 264330699035

Status : Marked For Review

Chosen Option : 2

**Q.2** What is the full form of email?

- Ans**
- ☒ 1. Express mail
  - ☒ 2. Efficient mail
  - ☒ 3. Electro mail
  - ☒ 4. Electronic mail

Question ID : 264330182023

Option 1 ID : 264330713933

Option 2 ID : 264330713934

Option 3 ID : 264330713931

Option 4 ID : 264330713932

Status : Answered

Chosen Option : 4

**Q.3** In MS Excel 365, Which option is typically used to save a new spreadsheet for the first time?

- Ans**
- ☒ 1. Save and New
  - ☒ 2. Save and Print
  - ☒ 3. Save As
  - ☒ 4. Close

Question ID : 264330177659

Option 1 ID : 264330696753

Option 2 ID : 264330696754

Option 3 ID : 264330696751

Option 4 ID : 264330696752

Status : Answered

Chosen Option : 1

Q.4 Which of the following is used to select the entire paragraph in MS-Word 365?

- Ans ☒ 1. Triple-click  
☒ 2. Double-click  
☒ 3. Scroll  
☒ 4. Single-click

Question ID : 264330175971  
 Option 1 ID : 264330690181  
 Option 2 ID : 264330690180  
 Option 3 ID : 264330690182  
 Option 4 ID : 264330690179  
 Status : Answered  
 Chosen Option : 2

Q.5 The keyboard shortcut \_\_\_\_\_ is used to create bullets in MS Word 2010.

- Ans ☒ 1. Ctrl + Shift + B  
☒ 2. Ctrl + Shift + L  
☒ 3. Ctrl + Alt + L  
☒ 4. Ctrl + Alt + B

Question ID : 264330181073  
 Option 1 ID : 264330710235  
 Option 2 ID : 264330710237  
 Option 3 ID : 264330710236  
 Option 4 ID : 264330710238  
 Status : Not Answered  
 Chosen Option : --

Q.6 Which of the following shortcut key is used to convert the selected font to subscript in MS Word 365?

- Ans ☒ 1. Shift + =  
☒ 2. Ctrl ++  
☒ 3. Ctrl +=  
☒ 4. Shift ++

Question ID : 264330179440  
 Option 1 ID : 264330703765  
 Option 2 ID : 264330703764  
 Option 3 ID : 264330703763  
 Option 4 ID : 264330703766  
 Status : Not Answered  
 Chosen Option : --

Q.7 Which is the following options defines the 'Clipboard' in Microsoft Word 365?

- Ans ☒ 1. Accessing the internet  
☒ 2. Changing font settings  
☒ 3. Creating hyperlinks  
☒ 4. Storing and managing copied or cut text and objects

Question ID : 264330182787  
 Option 1 ID : 264330716919  
 Option 2 ID : 264330716921  
 Option 3 ID : 264330716922  
 Option 4 ID : 264330716920  
 Status : Answered  
 Chosen Option : 4

Q.8 In MS Excel 365, Which of the following is used to open a save dialog box in MS-Excel?

- Ans
- ☒ 1. View -> save
  - ☒ 2. Home -> save
  - ☒ 3. Data -> save
  - ☒ 4. File -> save

Question ID : 264330178258

Option 1 ID : 264330699087

Option 2 ID : 264330699090

Option 3 ID : 264330699088

Option 4 ID : 264330699089

Status : Answered

Chosen Option : 1

Q.9 The thesaurus tool in MS word 365 is used for \_\_\_\_\_.

- Ans
- ☒ 1. finding similar words in the document
  - ☒ 2. checking for nouns and verbs
  - ☒ 3. checking for synonyms and antonyms
  - ☒ 4. finding repeated words in the document

Question ID : 264330182070

Option 1 ID : 264330714121

Option 2 ID : 264330714122

Option 3 ID : 264330714119

Option 4 ID : 264330714120

Status : Marked For Review

Chosen Option : 4

Q.10 In Microsoft Excel 365, which type of sorting places values from smallest to largest?

- Ans
- ☒ 1. Ascending order
  - ☒ 2. Random order
  - ☒ 3. Descending order
  - ☒ 4. Alphanumeric order

Question ID : 264330180691

Option 1 ID : 264330708732

Option 2 ID : 264330708733

Option 3 ID : 264330708731

Option 4 ID : 264330708734

Status : Answered

Chosen Option : 1