

Constable Executive Male and Female in Delhi Police Examination 2023

| | |
|----------------|----------------------------------------------------------------------|
| Roll Number | |
| Candidate Name | |
| Venue Name | |
| Exam Date | 23/11/2023 |
| Exam Time | 3:00 PM - 4:30 PM |
| Subject | Constable Executive Male and Female in Delhi Police Examination 2023 |

Section : General Knowledge

Q.1 Who was known as 'Zinda Pir'?

- Ans ☒ 1. Babur
☒ 2. Aurangzeb
☒ 3. Humayun
☒ 4. Akbar

Question ID : 264330123741
 Option 1 ID : 264330485000
 Option 2 ID : 264330485002
 Option 3 ID : 264330485001
 Option 4 ID : 264330484999
 Status : Answered
 Chosen Option : 2

Q.2 Suryoday Small Finance Bank is the company from _____ to obtain a 'small finance bank' license from the Reserve Bank of India.

- Ans ☒ 1. Madhya Pradesh
☒ 2. Andhra Pradesh
☒ 3. Maharashtra
☒ 4. Gujarat

Question ID : 264330116493
 Option 1 ID : 264330458057
 Option 2 ID : 264330458060
 Option 3 ID : 264330458058
 Option 4 ID : 264330458059
 Status : Answered
 Chosen Option : 2

Q.3 In cricket, which of the following is considered as LBW?

- Ans ☒ 1. The fielder catches a batted ball on the fly.
☒ 2. The batsman's body interferes with a bowled ball that would hit the wicket.
☒ 3. The bowler knocks over (or, breaks) the wicket with a bowl.
☒ 4. The fielder catches a ground ball and throws it at the wicket, knocking it down before the batsman gets there.

Question ID : 264330113758
 Option 1 ID : 264330447119
 Option 2 ID : 264330447117
 Option 3 ID : 264330447118
 Option 4 ID : 264330447120
 Status : Answered
 Chosen Option : 2

Test Prime

**ALL EXAMS,
ONE SUBSCRIPTION**



70,000+
Mock Tests



**Personalised
Report Card**



**Unlimited
Re-Attempt**



600+
Exam Covered



**Previous Year
Papers**



**500%
Refund**



ATTEMPT FREE MOCK NOW

Q.4 The number of players playing in a team in the T20 cricket match is _____.

- Ans
- ☒ 1. 12
 - ☒ 2. 11
 - ☒ 3. 10
 - ☒ 4. 13

Question ID : 264330130647
Option 1 ID : 264330511701
Option 2 ID : 264330511700
Option 3 ID : 264330511699
Option 4 ID : 264330511702
Status : Answered
Chosen Option : 2

Q.5 Who among the following Delhi-based Bharatanatyam dancers received the Nritya Perunjyothi award for the year 2021?

- Ans
- ☒ 1. Lakshmi Vishwanathan
 - ☒ 2. Pandit Birju Maharaj
 - ☒ 3. Chitra Visweswaran
 - ☒ 4. Geeta Chandran

Question ID : 264330112874
Option 1 ID : 264330443583
Option 2 ID : 264330443584
Option 3 ID : 264330443581
Option 4 ID : 264330443582
Status : Not Attempted and Marked For Review
Chosen Option : --

Q.6 Typhoid is caused by _____.

- Ans
- ☒ 1. Protozoa
 - ☒ 2. bacteria
 - ☒ 3. Fungi
 - ☒ 4. Virus

Question ID : 264330117596
Option 1 ID : 264330462411
Option 2 ID : 264330462409
Option 3 ID : 264330462412
Option 4 ID : 264330462410
Status : Marked For Review
Chosen Option : 2

Q.7 Bhuban Kumar of Purulia is an award-winning _____ dancer.

- Ans
- ☒ 1. Kathak
 - ☒ 2. Kuchipudi
 - ☒ 3. Chhau
 - ☒ 4. Kathakali

Question ID : 264330182984
Option 1 ID : 264330717669
Option 2 ID : 264330717670
Option 3 ID : 264330717668
Option 4 ID : 264330717671
Status : Marked For Review
Chosen Option : 3

Q.8 Bindusara was the successor of which of the following Mauryan emperors?

- Ans ☒ 1. Shalishuka
☒ 2. Chandragupta Maurya
☒ 3. Ashoka
☒ 4. Devavarman

Question ID : 264330182687
 Option 1 ID : 264330716519
 Option 2 ID : 264330716521
 Option 3 ID : 264330716522
 Option 4 ID : 264330716520
 Status : Answered
 Chosen Option : 2

Q.9 A small enterprise is one in which investment in plant and machinery does NOT exceed what amount?

- Ans ☒ 1. ₹5 crore
☒ 2. ₹15 crore
☒ 3. ₹10 crore
☒ 4. ₹2 crore

Question ID : 264330118188
 Option 1 ID : 264330464568
 Option 2 ID : 264330464570
 Option 3 ID : 264330464569
 Option 4 ID : 264330464567
 Status : Not Answered
 Chosen Option : --

Q.10 Tribal Welfare Ministers in Chhattisgarh, Jharkhand, Madhya Pradesh and Odisha are appointed by the _____.

- Ans ☒ 1. Tribal Development Council
☒ 2. Prime Minister
☒ 3. Chief Minister
☒ 4. Governor

Question ID : 264330120189
 Option 1 ID : 264330471014
 Option 2 ID : 264330471013
 Option 3 ID : 264330471012
 Option 4 ID : 264330471011
 Status : Not Attempted and Marked For Review
 Chosen Option : --

Q.11 The 'Hanukkah' celebration is associated with which of the following communities?

- Ans ☒ 1. Buddhist
☒ 2. Jain
☒ 3. Jewish
☒ 4. Parsi

Question ID : 264330111154
 Option 1 ID : 264330436704
 Option 2 ID : 264330436701
 Option 3 ID : 264330436703
 Option 4 ID : 264330436702
 Status : Answered
 Chosen Option : 3

Q.12 Which Article empowers the Supreme Court to issue directions or writs for the enforcement of Fundamental Rights?

- Ans** ☒ 1. Article 32
☒ 2. Article 29
☒ 3. Article 31
☒ 4. Article 30

Question ID : 264330130779
 Option 1 ID : 264330512230
 Option 2 ID : 264330512227
 Option 3 ID : 264330512229
 Option 4 ID : 264330512228
 Status : Answered
 Chosen Option : 1

Q.13 According to the National Population Policy 2000, what is the target year for reaching stability in population?

- Ans** ☒ 1. 2045
☒ 2. 2050
☒ 3. 2070
☒ 4. 2065

Question ID : 264330120322
 Option 1 ID : 264330471539
 Option 2 ID : 264330471541
 Option 3 ID : 264330471540
 Option 4 ID : 264330471542
 Status : Answered
 Chosen Option : 3

Q.14 The practice of sati was made illegal and punishable in the year 1829, under Governor-General _____.

- Ans** ☒ 1. William Bentinck
☒ 2. John Shore
☒ 3. Henry Hardinge
☒ 4. Charles Metcalfe

Question ID : 264330117688
 Option 1 ID : 264330462747
 Option 2 ID : 264330462748
 Option 3 ID : 264330462750
 Option 4 ID : 264330462749
 Status : Answered
 Chosen Option : 1

Q.15 Which of the following tribal dances is performed in Tripura by the Mog community?

- Ans** ☒ 1. Wangala
☒ 2. Hozagiri
☒ 3. Hai-Hak
☒ 4. Sangrai

Question ID : 264330106194
 Option 1 ID : 264330417077
 Option 2 ID : 264330417080
 Option 3 ID : 264330417079
 Option 4 ID : 264330417078
 Status : Answered
 Chosen Option : 2

Q.16 Upon application of heat energy, the atoms of an ice cube start vibrating. At one point, the atoms have so much energy that they break away from their fixed position and loose the fixed structure. We can see this as the formation of water. What is this particular point called?

- Ans
- ☒ 1. Softening point
 - ☒ 2. Decomposition temperature
 - ☒ 3. Boiling point
 - ☒ 4. Melting point

Question ID : 264330177022

Option 1 ID : 264330694285

Option 2 ID : 264330694286

Option 3 ID : 264330694283

Option 4 ID : 264330694284

Status : Answered

Chosen Option : 4

Q.17 Shivnath Mishra is an exponent of Benaras Gharana and he plays the _____ .

- Ans
- ☒ 1. Harmonium
 - ☒ 2. Rudra Veena
 - ☒ 3. Sitar
 - ☒ 4. Tabla

Question ID : 264330111950

Option 1 ID : 264330439885

Option 2 ID : 264330439888

Option 3 ID : 264330439887

Option 4 ID : 264330439886

Status : Not Answered

Chosen Option : --

Q.18 As per the 2nd Advance Estimate of the Ministry of Agriculture and Farmers Welfare, the record foodgrains production of _____ million tonnes is estimated in India in the year 2021-22.

- Ans
- ☒ 1. 378.54
 - ☒ 2. 420.78
 - ☒ 3. 501.16
 - ☒ 4. 316.06

Question ID : 264330119878

Option 1 ID : 264330469789

Option 2 ID : 264330469788

Option 3 ID : 264330469790

Option 4 ID : 264330469787

Status : Not Answered

Chosen Option : --

Q.19 Pancha Mahal is located in which of these cities?

- Ans ☒ 1. Fatehpur Sikri
☒ 2. Jaipur
☒ 3. Delhi
☒ 4. Ahmedabad

Question ID : 264330109317

Option 1 ID : 264330429546

Option 2 ID : 264330429545

Option 3 ID : 264330429548

Option 4 ID : 264330429547

Status : Not Attempted and
Marked For Review

Chosen Option : --

Q.20 In which of the following years was the Gandhi-Irwin Pact signed with the government agreeing to release all political prisoners?

- Ans ☒ 1. 1930
☒ 2. 1928
☒ 3. 1931
☒ 4. 1929

Question ID : 264330112404

Option 1 ID : 264330441702

Option 2 ID : 264330441704

Option 3 ID : 264330441701

Option 4 ID : 264330441703

Status : Answered

Chosen Option : 3

Q.21 What is the full form of 'BPO'?

- Ans ☒ 1. Buying Process Outsourcing
☒ 2. Business Product Outsourcing
☒ 3. Business Process Outcome
☒ 4. Business Process Outsourcing

Question ID : 26433059299

Option 1 ID : 264330232072

Option 2 ID : 264330232073

Option 3 ID : 264330232075

Option 4 ID : 264330232074

Status : Answered

Chosen Option : 2

Q.22 Which of the following is a biological name for a Housefly?

- Ans ☒ 1. Poaceae
☒ 2. Triticum aestivum
☒ 3. Primata
☒ 4. Musca domestica

Question ID : 264330131732

Option 1 ID : 264330516029

Option 2 ID : 264330516027

Option 3 ID : 264330516030

Option 4 ID : 264330516028

Status : Answered

Chosen Option : 4

Q.23 Which of the following Articles pertain to the Right against Exploitation?

- Ans ☒ 1. Articles 23-24
☒ 2. Articles 14-18
☒ 3. Articles 25-28
☒ 4. Articles 19-22

Question ID : 264330116392
 Option 1 ID : 264330457655
 Option 2 ID : 264330457653
 Option 3 ID : 264330457656
 Option 4 ID : 264330457654
 Status : Answered
 Chosen Option : 2

Q.24 What is used to make transparent soaps?

- Ans ☒ 1. Sodium chloride
☒ 2. Ethanol
☒ 3. Rosin
☒ 4. Sodium carbonate

Question ID : 264330113343
 Option 1 ID : 264330445457
 Option 2 ID : 264330445459
 Option 3 ID : 264330445460
 Option 4 ID : 264330445458
 Status : Not Attempted and Marked For Review
 Chosen Option : --

Q.25 The concept of 'Concurrent List' in the Constitution of India is borrowed from _____.

- Ans ☒ 1. Australia
☒ 2. Germany
☒ 3. Japan
☒ 4. Canada

Question ID : 264330133043
 Option 1 ID : 264330521223
 Option 2 ID : 264330521226
 Option 3 ID : 264330521225
 Option 4 ID : 264330521224
 Status : Answered
 Chosen Option : 1

Q.26 Biswa and Phulaich are the cultural festivals of ____.

- Ans ☒ 1. Himachal Pradesh
☒ 2. West Bengal
☒ 3. Karnataka
☒ 4. Bihar

Question ID : 264330141781
 Option 1 ID : 264330555443
 Option 2 ID : 264330555445
 Option 3 ID : 264330555446
 Option 4 ID : 264330555444
 Status : Not Answered
 Chosen Option : --

Q.27 Which programme was restructured and renamed as 'National Rural Employment Programme'?

- Ans ☒ 1. Integrated Rural Development Programme
☒ 2. Food for Work Programme
☒ 3. National Institute of Rural Development
☒ 4. Rural Landless Employment Guarantee Programme

Question ID : 264330112495
 Option 1 ID : 264330442067
 Option 2 ID : 264330442066
 Option 3 ID : 264330442068
 Option 4 ID : 264330442065
 Status : Answered
 Chosen Option : 4

Q.28 Which Article of the Constitution defines Advocate General as the legal advisor to a State Government?

- Ans ☒ 1. Article 166
☒ 2. Article 165
☒ 3. Article 164
☒ 4. Article 167

Question ID : 264330168218
 Option 1 ID : 264330659749
 Option 2 ID : 264330659748
 Option 3 ID : 264330659747
 Option 4 ID : 264330659750
 Status : Answered
 Chosen Option : 2

Q.29 Which of the following Trophies/Cups is related to football?

- Ans ☒ 1. Davis Cup
☒ 2. Sultan Azlan Shah Cup
☒ 3. Ranji Trophy
☒ 4. Santosh Trophy

Question ID : 264330132553
 Option 1 ID : 264330519309
 Option 2 ID : 264330519310
 Option 3 ID : 264330519307
 Option 4 ID : 264330519308
 Status : Answered
 Chosen Option : 4

Q.30 Which of the following unemployment types is the result of people voluntarily leaving jobs in search of better ones?

- Ans ☒ 1. Disguised unemployment
☒ 2. Cyclical unemployment
☒ 3. Frictional unemployment
☒ 4. Structural unemployment

Question ID : 264330183053
 Option 1 ID : 264330717946
 Option 2 ID : 264330717947
 Option 3 ID : 264330717945
 Option 4 ID : 264330717944
 Status : Answered
 Chosen Option : 3

Q.31 When was Dev Samaj established?

- Ans ☒ 1. 1850
☒ 2. 1902
☒ 3. 1860
☒ 4. 1887

Question ID : 264330114058
 Option 1 ID : 264330448317
 Option 2 ID : 264330448318
 Option 3 ID : 264330448319
 Option 4 ID : 264330448320
 Status : Not Answered
 Chosen Option : --

Q.32 Which of the following statements is/are true about Regional Rural Banks?

- I. RRBs were established in 1977.
 II. The Government of India contributes 50% of the share capital of RRB.
 III. Narasimham Committee recommended the amalgamation of RRBs.

- Ans ☒ 1. Only II and III
☒ 2. Only I
☒ 3. Only II
☒ 4. Only III

Question ID : 264330141456
 Option 1 ID : 264330554162
 Option 2 ID : 264330554159
 Option 3 ID : 264330554160
 Option 4 ID : 264330554161
 Status : Answered
 Chosen Option : 4

Q.33 Padma Bhushan 2022, awardee _____ is a Hindustani Classical musician.

- Ans ☒ 1. Madhuri Barthwal
☒ 2. Victor Banerjee
☒ 3. Geeta Chandran
☒ 4. Rashid Khan

Question ID : 264330111948
 Option 1 ID : 264330439877
 Option 2 ID : 264330439878
 Option 3 ID : 264330439880
 Option 4 ID : 264330439879
 Status : Marked For Review
 Chosen Option : 3

Q.34 Which of the following led to reservation of industrial activities for private and public sectors for the first time in India?

- Ans** ☒ 1. The Industrial Policy Resolution, 1948
☒ 2. Industrial Policy Resolution, 1956
☒ 3. The Statement of Industrial Policy, 1945
☒ 4. Industries Development and Regulation Act, 1951

Question ID : 264330111748
 Option 1 ID : 264330439078
 Option 2 ID : 264330439080
 Option 3 ID : 264330439077
 Option 4 ID : 264330439079
 Status : Answered
 Chosen Option : 2

Q.35 The term 'scoop' is used in which of the following sports?

- Ans** ☒ 1. Hockey
☒ 2. Tennis
☒ 3. Badminton
☒ 4. Football

Question ID : 264330118475
 Option 1 ID : 264330465302
 Option 2 ID : 264330465303
 Option 3 ID : 264330465301
 Option 4 ID : 264330465304
 Status : Answered
 Chosen Option : 1

Q.36 In which season do Western disturbances lead to rainfall in Northern states?

- Ans** ☒ 1. Summer season
☒ 2. Monsoon season
☒ 3. Spring season
☒ 4. Winter season

Question ID : 264330166377
 Option 1 ID : 264330652562
 Option 2 ID : 264330652561
 Option 3 ID : 264330652560
 Option 4 ID : 264330652559
 Status : Answered
 Chosen Option : 4

Q.37 In which of the following years did Mahatma Gandhi lead the Dandi March?

- Ans** ☒ 1. 1930
☒ 2. 1914
☒ 3. 1919
☒ 4. 1918

Question ID : 264330112411
 Option 1 ID : 264330441732
 Option 2 ID : 264330441729
 Option 3 ID : 264330441731
 Option 4 ID : 264330441730
 Status : Answered
 Chosen Option : 1

Q.38 For which of the following dance forms was Nalini Asthana awarded the Padma Shri in 2022?

- Ans** ☒ 1. Kathak
☒ 2. Kathakali
☒ 3. Bharatanatyam
☒ 4. Mohiniyattam

Question ID : 264330111970
 Option 1 ID : 264330439965
 Option 2 ID : 264330439966
 Option 3 ID : 264330439967
 Option 4 ID : 264330439968
 Status : Answered
 Chosen Option : 1

Q.39 The author of the book 'My Music, My Life' is the famous Sitar player. Who is he?

- Ans** ☒ 1. Hari Prasad Chaurasia
☒ 2. Ravi Shankar
☒ 3. Zakir Hussain
☒ 4. Brij Narayan

Question ID : 264330112862
 Option 1 ID : 264330443535
 Option 2 ID : 264330443533
 Option 3 ID : 264330443534
 Option 4 ID : 264330443536
 Status : Answered
 Chosen Option : 2

Q.40 During Chandragupta Maurya's reign, the administration of Pataliputra, which was the capital of the Mauryas was managed by how many committees?

- Ans** ☒ 1. Three
☒ 2. Eight
☒ 3. Six
☒ 4. Four

Question ID : 264330171665
 Option 1 ID : 264330673263
 Option 2 ID : 264330673266
 Option 3 ID : 264330673265
 Option 4 ID : 264330673264
 Status : Answered
 Chosen Option : 2

Q.41 Which of the following Articles of the Constitution of India says that a State shall not deny equal protection of the laws within the territory of India?

- Ans** ☒ 1. Article 12
☒ 2. Article 14
☒ 3. Article 11
☒ 4. Article 13

Question ID : 264330110577
 Option 1 ID : 264330434586
 Option 2 ID : 264330434588
 Option 3 ID : 264330434585
 Option 4 ID : 264330434587
 Status : Answered
 Chosen Option : 1

Q.42 In which two states is the Agasthyamala Biosphere Reserve located?

- Ans
- ☒ 1. Maharashtra and Gujarat
 - ☒ 2. Kerala and Tamil Nadu
 - ☒ 3. Madhya Pradesh and Uttar Pradesh
 - ☒ 4. Gujarat and Rajasthan

Question ID : 264330173628
 Option 1 ID : 264330680993
 Option 2 ID : 264330680994
 Option 3 ID : 264330680992
 Option 4 ID : 264330680991
 Status : Answered
 Chosen Option : 2

Q.43 The famous Hindi novel 'Suraj Ka SatvanGhoda' is written by:

- Ans
- ☒ 1. Kamleshwar
 - ☒ 2. Phanishwar Nath Renu
 - ☒ 3. Dharmveer Bharati
 - ☒ 4. Sri Lal Shukla

Question ID : 26433064630
 Option 1 ID : 264330253113
 Option 2 ID : 264330253114
 Option 3 ID : 264330253112
 Option 4 ID : 264330253115
 Status : Answered
 Chosen Option : 4

Q.44 In whose consultation does the President have the power to make rules to the procedure with respect to joint sittings of the two Houses?

- Ans
- ☒ 1. Chairman and Speaker
 - ☒ 2. Speaker and Members of Lok Sabha
 - ☒ 3. Speaker, Chairman and Members of Parliament
 - ☒ 4. Chairman and members of Rajya Sabha

Question ID : 264330110600
 Option 1 ID : 264330434678
 Option 2 ID : 264330434679
 Option 3 ID : 264330434680
 Option 4 ID : 264330434677
 Status : Answered
 Chosen Option : 1

Q.45 Who is the main architect of Shri Ram Mandir of Ayodhya?

- Ans
- ☒ 1. Chitra Vishwanath
 - ☒ 2. Chandrakant Bhai Sompura
 - ☒ 3. Sashi Prabhu
 - ☒ 4. Ram Suthar

Question ID : 26433074104
 Option 1 ID : 264330290539
 Option 2 ID : 264330290537
 Option 3 ID : 264330290538
 Option 4 ID : 264330290536
 Status : Marked For Review
 Chosen Option : 4

Q.46 Delhi first became the capital of a kingdom during the reign of the ____.

- Ans
- ☐ 1. Mamluks
 - ☐ 2. Tuglaqs
 - ☐ 3. Chauhans
 - ☒ 4. Tomara Rajputs

Question ID : 264330166881
 Option 1 ID : 264330654560
 Option 2 ID : 264330654561
 Option 3 ID : 264330654559
 Option 4 ID : 264330654562
 Status : Answered
 Chosen Option : 4

Q.47 According to Census 2011, which state of India has the lowest population?

- Ans
- ☐ 1. Mizoram
 - ☐ 2. Arunachal Pradesh
 - ☒ 3. Sikkim
 - ☐ 4. Goa

Question ID : 264330132741
 Option 1 ID : 264330520061
 Option 2 ID : 264330520060
 Option 3 ID : 264330520062
 Option 4 ID : 264330520059
 Status : Answered
 Chosen Option : 3

Q.48 Which of the following Iron and Steel Plants of India is situated on the coast of Bay of Bengal?

- Ans
- ☐ 1. Bhadravati
 - ☐ 2. Salem
 - ☐ 3. Durgapur
 - ☒ 4. Vishakhapatnam

Question ID : 264330120467
 Option 1 ID : 264330472122
 Option 2 ID : 264330472119
 Option 3 ID : 264330472120
 Option 4 ID : 264330472121
 Status : Answered
 Chosen Option : 3

Q.49 What is the position of the earth called when it is farthest from the sun during its revolution?

- Ans
- ☐ 1. Abherilion
 - ☐ 2. Pepihelion
 - ☐ 3. Perihelion
 - ☒ 4. Aphelion

Question ID : 264330134897
 Option 1 ID : 264330528525
 Option 2 ID : 264330528526
 Option 3 ID : 264330528523
 Option 4 ID : 264330528524
 Status : Answered
 Chosen Option : 4

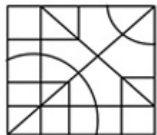
Q.50 Which Act led to the shift from curbing competition to promoting competition in the market?

- Ans
- ☒ 1. MRTP Act 1969
 - ☒ 2. Competition Act 2002
 - ☒ 3. Banking Regulation Act 1949
 - ☒ 4. Copra Act

Question ID : 264330111620
Option 1 ID : 264330438565
Option 2 ID : 264330438567
Option 3 ID : 264330438568
Option 4 ID : 264330438566
Status : Answered
Chosen Option : 1

Section : Reasoning

Q.1 Select the option figure that is embedded in the given figure (rotation is NOT allowed).



- Ans
- ☒ 1.
 - ☒ 2.
 - ☒ 3.
 - ☒ 4.

Question ID : 26433091723
Option 1 ID : 264330360258
Option 2 ID : 264330360260
Option 3 ID : 264330360259
Option 4 ID : 264330360257
Status : Answered
Chosen Option : 3

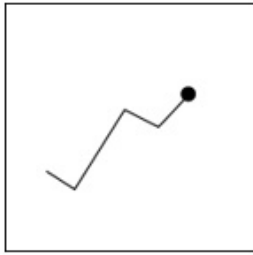
Q.2 Select the option that is related to the fourth number in the same way as the first number is related to the second number and the fifth number is related to the sixth number.
 $252 : 6 :: ? : 9 :: 1872 : 12$

- Ans ☒ 1. 829
☒ 2. 729
☒ 3. 810
☒ 4. 750

Question ID : 26433052018
Option 1 ID : 264330203377
Option 2 ID : 264330203374
Option 3 ID : 264330203375
Option 4 ID : 264330203376
Status : Answered
Chosen Option : 3



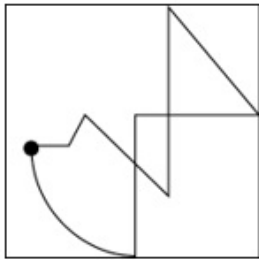
Q.3 Find out the figure amongst the four option in which figure X is embedded (Rotation is not allowed)



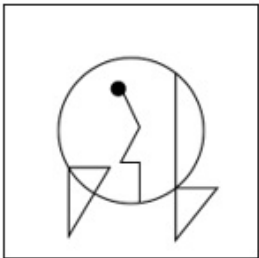
(X)

Ans

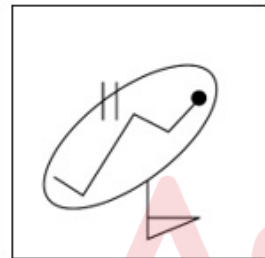
✗ 1.



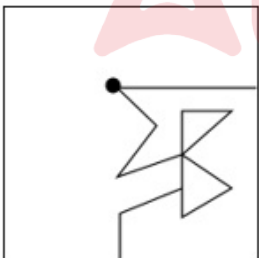
✗ 2.



✓ 3.



✗ 4.



Question ID : 264330121467

Option 1 ID : 264330476054

Option 2 ID : 264330476052

Option 3 ID : 264330476051

Option 4 ID : 264330476053

Status : Answered


Chosen Option : 3

Q.4 Select the option in which the given figure is embedded (rotation is NOT allowed).




Ans

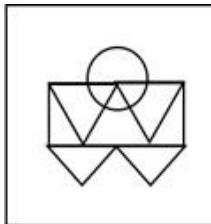
✗ 1.



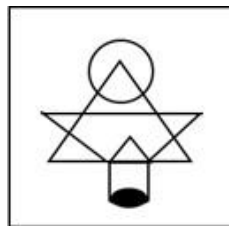
✗ 2.



✗ 3.



✓ 4.



Question ID : 264330117968

Option 1 ID : 264330463687

Option 2 ID : 264330463690

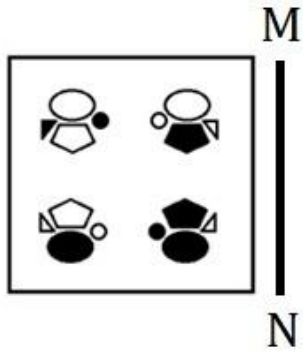
Option 3 ID : 264330463689

Option 4 ID : 264330463688

Status : Answered

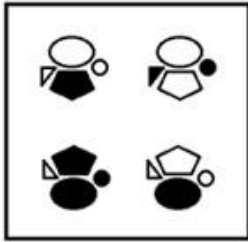
Chosen Option : 4

Q.5 Select the correct mirror image of the given combination when the mirror is placed at 'MN' as shown below.

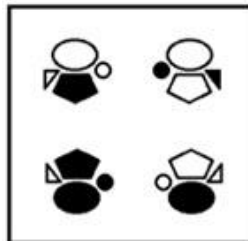


Ans

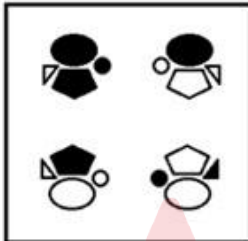
✗ 1.



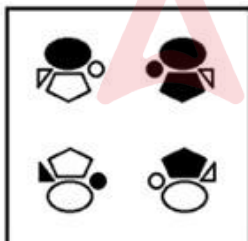
✓ 2.



✗ 3.



✗ 4.



Question ID : 264330112310

Option 1 ID : 264330441328

Option 2 ID : 264330441326

Option 3 ID : 264330441327

Option 4 ID : 264330441325

Status : Answered

Chosen Option : 2

Q.6 Select the word-pair that best represents a similar relationship to the one expressed in the pair of words given below. (The words must be considered as meaningful English words and must not be related to each other based on the number of letters/number of consonants/vowels in the word)

Seismology : Earthquakes

Ans ☒ 1. Ornithology : Birds

☐ 2. Paedology : Plants

☐ 3. Entomology : Bone

☐ 4. Craniology : Muscle

Question ID : 264330180614

Option 1 ID : 264330708426

Option 2 ID : 264330708424

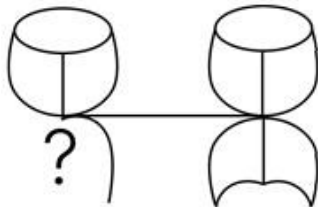
Option 3 ID : 264330708423

Option 4 ID : 264330708425

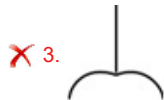

Status : Marked For Review

Chosen Option : 1

Q.7 Select the figure from the given options that will replace the question mark (?) in the figure given below to complete the pattern so that the final image is symmetrical.



Ans



Question ID : 264330114733

Option 1 ID : 264330451019

Option 2 ID : 264330451017

Option 3 ID : 264330451018

Option 4 ID : 264330451020

Status : Answered

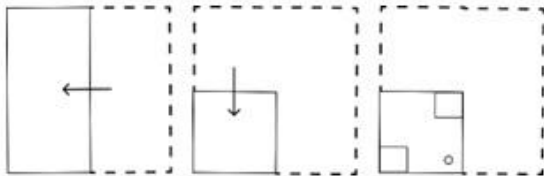
Chosen Option : 1

Q.8 In a certain code language, 'COMPUTER' is written as 'DQNRVVFT' and 'GARDENER' is written as 'HCSFFPFT'. How will 'ACADEMIC' be written as in that language?

- Ans
- ☒ 1. BEBEFOJE
 - ☒ 2. BFBFFOJE
 - ☒ 3. BECFFOJE
 - ☒ 4. BEBFFOJE

Question ID : 26433093121
 Option 1 ID : 264330365740
 Option 2 ID : 264330365737
 Option 3 ID : 264330365739
 Option 4 ID : 264330365738
 Status : Answered
 Chosen Option : 4

Q.9 A paper is folded and cut as shown below. How will it appear when unfolded?



Ans

- ☒ 1.
- ☒ 2.
- ☒ 3.
- ☒ 4.

Question ID : 264330114705
 Option 1 ID : 264330450908
 Option 2 ID : 264330450905
 Option 3 ID : 264330450906
 Option 4 ID : 264330450907
 Status : Answered
 Chosen Option : 3

Q.10 Select the correct combination of mathematical signs to sequentially replace the * signs and to balance the given equation.
 $34 * 58 * 2 * 96 * 4 = 29$

- Ans ☒ 1. -, ÷, +, +
☒ 2. x, ÷, +, -
☒ 3. +, x, -, +
☒ 4. ÷, x, +, -

Question ID : 26433092507
Option 1 ID : 264330363320
Option 2 ID : 264330363319
Option 3 ID : 264330363318
Option 4 ID : 264330363317
Status : Answered
Chosen Option : 1

Q.11 Select the correct mirror image of the given combination when the mirror is placed at 'PQ' as shown below.

M 5 R Y 9 U | P
Q

- Ans ☒ 1. U e Y я 2 M
☒ 2. U e Y я 2 M
☒ 3. U e Y я 2 M
☒ 4. U e Y я 2 M

Question ID : 264330129813
Option 1 ID : 264330508485
Option 2 ID : 264330508483
Option 3 ID : 264330508484
Option 4 ID : 264330508486
Status : Answered
Chosen Option : 1

Q.12 Which figure should replace the question mark (?) if the following series were to be continued?

| | | | | | |
|---------|-------|-------|-------|-----|---|
| B | A | A | 4 | 4 | |
| A 4 X X | B 4 4 | X B B | A 4 4 | B A | ? |
| 4 | 4 | 4 | X | X | |

Ans

- ✖ 1.

4

A B X

4
- ✔ 2.

4

A 4 X

B
- ✖ 3.

X

A 4 B

4
- ✖ 4.

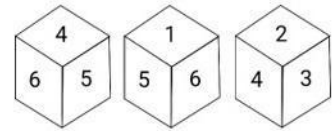
X

A 4 4

B

Question ID : 264330103889
Option 1 ID : 264330407858
Option 2 ID : 264330407857
Option 3 ID : 264330407860
Option 4 ID : 264330407859
Status : Answered
Chosen Option : 2

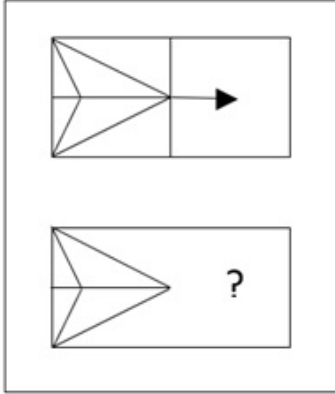
Q.13 Three different positions of the same cube are shown. Which number is on the opposite side of 4?



- Ans
- ✖ 1. 3
- ✖ 2. 5
- ✔ 3. 1
- ✖ 4. 2

Question ID : 264330112040
Option 1 ID : 264330440246
Option 2 ID : 264330440245
Option 3 ID : 264330440248
Option 4 ID : 264330440247
Status : Answered
Chosen Option : 3

Q.14 Select the figure from the options that can replace the question mark (?) and complete the given pattern so that final image is symmetrical.



Ans

- ☒ 1.
- ☒ 2.
- ☒ 3.
- ☒ 4.

Question ID : 264330121813

Option 1 ID : 264330477424

Option 2 ID : 264330477426

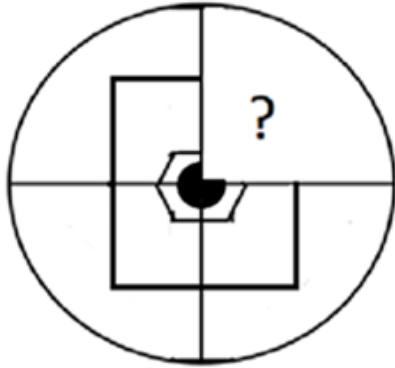
Option 3 ID : 264330477425

Option 4 ID : 264330477423

Status : Answered

Chosen Option : 4

Q.15 Select the option figure that will replace the question mark (?) in the figure given below to complete the pattern.



Ans

✓ 1.



✗ 2.



✗ 3.



✗ 4.



Question ID : 264330118233

Option 1 ID : 264330464750

Option 2 ID : 264330464749

Option 3 ID : 264330464747

Option 4 ID : 264330464748

Status : Answered

Chosen Option : 1

Q.16 Select the option that represents the letters that, when sequentially placed from left to right in the blanks below, will complete the letter series.

C _ _ D F _ A S _ F _ A S D _ C A _ D _

- Ans
- ☒ 1. ASCDCSSF
 - ☒ 2. ASCDCDSF
 - ☒ 3. ASCDCFSF
 - ☒ 4. ASCDFCSF

Question ID : 26433092545
Option 1 ID : 264330363471
Option 2 ID : 264330363470
Option 3 ID : 264330363472
Option 4 ID : 264330363469
Status : Answered
Chosen Option : 3

Q.17 Select the number from among the given options that can replace the question mark (?) in the following series.

6, 14, 46, 174, 686, ?

- Ans
- ☒ 1. 897
 - ☒ 2. 3232
 - ☒ 3. 2734
 - ☒ 4. 344

Question ID : 264330109752
Option 1 ID : 264330431288
Option 2 ID : 264330431285
Option 3 ID : 264330431286
Option 4 ID : 264330431287
Status : Answered
Chosen Option : 3

Q.18 Read the given statements and conclusions carefully. Assuming that the information given in the statements is true, even if it appears to be at variance with commonly known facts, decide which of the given conclusions logically follow(s) from the statements.

Statements:

Some soldiers are officers.

Some officers are civilians.

Conclusions:

I. All soldiers are civilians.

II. All civilians are soldiers.

- Ans
- ☒ 1. Neither conclusion I nor II follows
 - ☒ 2. Only conclusion II follows
 - ☒ 3. Only conclusion I follows
 - ☒ 4. Both conclusions I and II follow

Question ID : 26433068295
Option 1 ID : 264330267695
Option 2 ID : 264330267693
Option 3 ID : 264330267692
Option 4 ID : 264330267694
Status : Answered
Chosen Option : 1

Q.19 Six students are sitting around a circular table facing the centre. Dipan is an immediate neighbour of both Hansika and Gargi. Ekansh is sitting second to the left of Gargi. Iman is sitting third to the right of Hansika. Firoz is an immediate neighbour of both Ekansh and Hansika. Who is an immediate neighbour of both Dipan and Iman?

- Ans ☒ 1. Hansika
☒ 2. Gargi
☒ 3. Firoz
☒ 4. Ekansh

Question ID : 264330110710

Option 1 ID : 264330435120

Option 2 ID : 264330435117

Option 3 ID : 264330435118

Option 4 ID : 264330435119

Status : Answered

Chosen Option : 2

Q.20 Select the correct combination of mathematical signs that can sequentially replace the * signs and balance the given expression.
 $55 * 11 * 7 * 9 * 32 * 36$

- Ans ☒ 1. +, -, x, +, =
☒ 2. +, x, -, =, +
☒ 3. ÷, +, x, -, =
☒ 4. x, +, -, +, =

Question ID : 26433074781

Option 1 ID : 264330293215

Option 2 ID : 264330293214

Option 3 ID : 264330293212

Option 4 ID : 264330293213

Status : Answered

Chosen Option : 3

Q.21 Select the figure that will replace the question mark (?) in the following figure series.



- Ans ☒ 1.
☒ 2.
☒ 3.
☒ 4.

Question ID : 264330108959

Option 1 ID : 264330428114

Option 2 ID : 264330428115

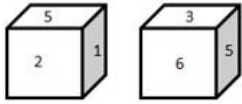
Option 3 ID : 264330428116

Option 4 ID : 264330428113

Status : Answered

Chosen Option : 4

Q.22 A dice with six faces is marked with six numbers 1, 2, 3, 4, 5 and 6, respectively. It is rolled 2 times and lands on the positions shown below. Which number is on the opposite plane of 2?



- Ans
- ☒ 1. 4
 - ☒ 2. 1
 - ☒ 3. 5
 - ☒ 4. 3

Question ID : 264330110542

Option 1 ID : 264330434445

Option 2 ID : 264330434446

Option 3 ID : 264330434447

Option 4 ID : 264330434448

Status : Answered

Chosen Option : 4



Q.23 In this question, Figure X is followed by four figures, numbered (1), (2), (3) and (4).
Select the option in which Figure X is embedded.



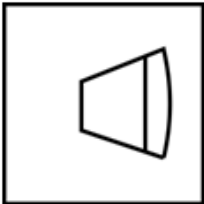
(X)

Ans

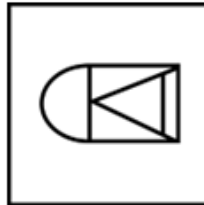
✗ 1.



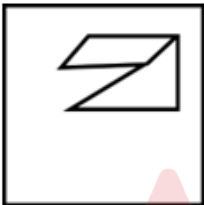
✗ 2.



✓ 3.



✗ 4.



Question ID : 264330175617

Option 1 ID : 264330688789

Option 2 ID : 264330688788

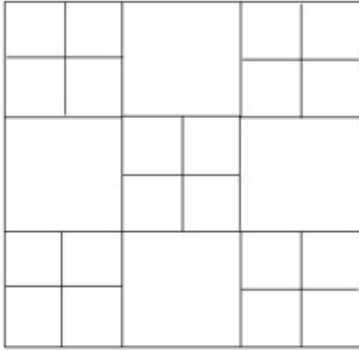
Option 3 ID : 264330688787

Option 4 ID : 264330688790

Status : Answered

Chosen Option : 3

Q.24 How many squares are there in the given figure?



- Ans
- ☒ 1. 36
 - ☒ 2. 34
 - ☒ 3. 32
 - ☒ 4. 30

Question ID : 26433085581

Option 1 ID : 264330336028

Option 2 ID : 264330336027

Option 3 ID : 264330336026

Option 4 ID : 264330336025

Status : Answered

Chosen Option : 2

Q.25 Which figure should replace the question mark (?) if the series were to be continued?

| | | | | |
|-----------|-----------|-----------|-----------|---|
| P A S T E | H A R T Z | Z T A R H | V T O R C | ? |
|-----------|-----------|-----------|-----------|---|

Ans

✗ 1. C O R T V

✗ 2. C V T O R

✓ 3. C R T O V

✗ 4. C R O T V

Question ID : 264330130822

Option 1 ID : 264330512401

Option 2 ID : 264330512399

Option 3 ID : 264330512402

Option 4 ID : 264330512400

Status : Answered

Chosen Option : 3

Section : Numerical Ability

Q.1 If $5.5x = 0.05y$, then the value of $\frac{y-3x}{y+3x}$ is:

Ans

✗ 1. $\frac{103}{113}$

✗ 2. $\frac{107}{117}$

✗ 3. $\frac{111}{113}$

✓ 4. $\frac{107}{113}$

Question ID : 264330105981

Option 1 ID : 264330416225

Option 2 ID : 264330416228

Option 3 ID : 264330416227

Option 4 ID : 264330416226

Status : Answered

Chosen Option : 4

Q.2 The diameter of a right circular cone is 14 cm, while its slant height is 11 cm. What is the volume of the cone? (Use $\pi = \frac{22}{7}$)

- Ans
- ☒ 1. $108\sqrt{2} \text{ cm}^3$
 - ☒ 2. $308\sqrt{2} \text{ cm}^3$
 - ☒ 3. $407\sqrt{3} \text{ cm}^3$
 - ☒ 4. $208\sqrt{2} \text{ cm}^3$

Question ID : 264330119370

Option 1 ID : 264330467769

Option 2 ID : 264330467767

Option 3 ID : 264330467768

Option 4 ID : 264330467770

Status : Answered

Chosen Option : 2

Q.3 A man bought 16 articles at ₹85 each, 15 at ₹65 each, and 12 at ₹75 each. What is the average price of each article? (Up to two places of decimal)

- Ans
- ☒ 1. ₹75.23
 - ☒ 2. ₹77.65
 - ☒ 3. ₹72.65
 - ☒ 4. ₹69.87

Question ID : 264330118411

Option 1 ID : 264330465045

Option 2 ID : 264330465048

Option 3 ID : 264330465046

Option 4 ID : 264330465047

Status : Answered

Chosen Option : 1

Q.4 The difference (in ₹, to the nearest integer) between the simple interest and the compound interest on ₹3,660 for one and a half years at 10% per annum, compounded half-yearly, is:

- Ans
- ☒ 1. 49
 - ☒ 2. 42
 - ☒ 3. 28
 - ☒ 4. 36

Question ID : 264330103559

Option 1 ID : 264330406541

Option 2 ID : 264330406543

Option 3 ID : 264330406542

Option 4 ID : 264330406544

Status : Not Answered

Chosen Option : --

Q.5 Rama's marks in two subjects, mathematics and physics, are in the ratio 8:13. If he got 25 marks more in physics than in mathematics, what are his marks in mathematics?

- Ans ☒ 1. 30
☒ 2. 40
☒ 3. 35
☒ 4. 25

Question ID : 264330111469
 Option 1 ID : 264330437961
 Option 2 ID : 264330437964
 Option 3 ID : 264330437963
 Option 4 ID : 264330437962
 Status : Answered
 Chosen Option : 2

Q.6 The product of two numbers is 2028 and their HCF is 13. Find their LCM.

- Ans ☒ 1. 168
☒ 2. 186
☒ 3. 156
☒ 4. 142

Question ID : 264330104215
 Option 1 ID : 264330409162
 Option 2 ID : 264330409164
 Option 3 ID : 264330409161
 Option 4 ID : 264330409163
 Status : Answered
 Chosen Option : 3

Q.7 A garrison of 1200 men has provisions for 15 days. How long will the provisions last if the garrison is increased by 600 men?

- Ans ☒ 1. 10 days
☒ 2. 6 days
☒ 3. 14 days
☒ 4. 12 days

Question ID : 264330182574
 Option 1 ID : 264330716088
 Option 2 ID : 264330716087
 Option 3 ID : 264330716090
 Option 4 ID : 264330716089
 Status : Answered
 Chosen Option : 1

Q.8 What must be the total percentage change (rounded off to 1 decimal place) in the volume of a cuboid if its length and breadth are increased by 24% and 45%, respectively, while its height is decreased by 55%?

- Ans ☒ 1. Increase, 14.9%
- ☒ 2. Decrease, 19.1%
- ☒ 3. Decrease, 14.9%
- ☒ 4. Increase, 19.1%

Question ID : 264330165070

Option 1 ID : 264330647409

Option 2 ID : 264330647408

Option 3 ID : 264330647410

Option 4 ID : 264330647407

Status : Answered

Chosen Option : 2

Q.9 Kumar invested a total of ₹16,900 partly in two schemes, A and B. The rate of simple interest in the two schemes were 14% p.a. and 11% p.a., respectively. If the total interest earned in 2 years was ₹4,498, then what was the amount invested in Scheme B?

- Ans ☒ 1. ₹3,200
- ☒ 2. ₹3,900
- ☒ 3. ₹3,000
- ☒ 4. ₹4,900

Question ID : 264330118084

Option 1 ID : 264330464153

Option 2 ID : 264330464151

Option 3 ID : 264330464154

Option 4 ID : 264330464152

Status : Answered

Chosen Option : 2

Q.10 An item was sold at a profit of 23.75%. If the cost price of the item was ₹1,000 more than what it actually was, while the selling price remained unchanged, the profit earned would have been only 10%. What was the actual cost price of the item (in ₹)?

- Ans ☒ 1. 8000
- ☒ 2. 8600
- ☒ 3. 8500
- ☒ 4. 7500

Question ID : 264330112539

Option 1 ID : 264330442242

Option 2 ID : 264330442244

Option 3 ID : 264330442241

Option 4 ID : 264330442243

Status : Not Answered

Chosen Option : --

Q.11 Rewa misread the number 45 as 54. Find the percentage increase or decrease in this process.

- Ans ☒ 1. 15% decrease
☒ 2. 20% increase
☒ 3. 15% increase
☒ 4. 20% decrease

Question ID : 264330131445

Option 1 ID : 264330514885

Option 2 ID : 264330514884

Option 3 ID : 264330514886

Option 4 ID : 264330514883

Status : Answered

Chosen Option : 2

Q.12 A shopkeeper sells an article for ₹360 after allowing a discount of 10%. What would have been its selling price (in ₹) had he offered a discount of 20%?

- Ans ☒ 1. 300
☒ 2. 320
☒ 3. 340
☒ 4. 290

Question ID : 264330183844

Option 1 ID : 264330721052

Option 2 ID : 264330721053

Option 3 ID : 264330721054

Option 4 ID : 264330721055

Status : Answered

Chosen Option : 2

Q.13 Find the total surface area (in cm^2) of a cylinder with the diameter of base 21 cm and height 42 cm.

(Take $\pi = \frac{22}{7}$)

- Ans ☒ 1. 3480
☒ 2. 3456
☒ 3. 3450
☒ 4. 3465

Question ID : 264330112441

Option 1 ID : 264330441852

Option 2 ID : 264330441851

Option 3 ID : 264330441850

Option 4 ID : 264330441849

Status : Answered

Chosen Option : 4

Q.14 A policeman chases a thief who is at a distance of 450 metres from him. The thief starts running at a speed of 9 km/h, the moment he sees the policeman. The policeman gives chase immediately with a speed of 12 km/h. Eventually, the thief is caught. What is the distance (in km) run by the thief?

Ans ☒ 1. 1.35

☐ 2. 1.65

☐ 3. 1.25

☐ 4. 1.55

Question ID : 264330183834

Option 1 ID : 264330721012

Option 2 ID : 264330721013

Option 3 ID : 264330721014

Option 4 ID : 264330721015

Status : Answered

Chosen Option : 1

Q.15 Which of the following numbers is a prime number?

Ans ☒ 1. 1049

☐ 2. 901

☐ 3. 917

☐ 4. 1047

Question ID : 264330106072

Option 1 ID : 264330416590

Option 2 ID : 264330416591

Option 3 ID : 264330416592

Option 4 ID : 264330416589

Status : Answered

Chosen Option : 1

Section : Computer Proficiency

Q.1 In MS Word 365, which of the following shortcut is used to centre align the selected text?

Ans ☐ 1. Ctrl + Shift + C

☒ 2. Ctrl + E

☐ 3. Ctrl + C

☐ 4. Ctrl + Shift + E

Question ID : 264330173359

Option 1 ID : 264330679918

Option 2 ID : 264330679915

Option 3 ID : 264330679916

Option 4 ID : 264330679917

Status : Answered

Chosen Option : 2

Q.2 In MS Excel 365, the title bar in Microsoft Excel is used for:

- Ans

1. displaying the title of a workbook

2. displaying the title of a sheet

3. displaying the title of a column

4. displaying the title of a row

Question ID : 264330182049

Option 1 ID : 264330714036

Option 2 ID : 264330714035

Option 3 ID : 264330714037

Option 4 ID : 264330714038

Status : Answered

Chosen Option : 2

Q.3 Which of the following keyboard shortcuts is/are used to open the Find and Replace dialog box in MS Word 365?

a) Ctrl + H

b) Ctrl + R

- Ans

1. Neither (a) nor (b)

2. Only (b)

3. Only (a)

4. Both (a) and (b)

Question ID : 264330180635

Option 1 ID : 264330708510

Option 2 ID : 264330708508

Option 3 ID : 264330708507

Option 4 ID : 264330708509

Status : Answered

Chosen Option : 3

Q.4 Which architecture connects individual devices directly, with equal responsibilities and powers, and without a central authority?

- Ans

1. Peer-to-Peer architecture

2. Distributed architecture

3. Client-Server architecture

4. Centralised architecture

Question ID : 264330179150

Option 1 ID : 264330702603

Option 2 ID : 264330702606

Option 3 ID : 264330702604

Option 4 ID : 264330702605

Status : Answered

Chosen Option : 1

Q.5 Which of the following is a simple function in MS Excel 365, that raises a given number to an exponent?

- Ans
- ☒ 1. AVERAGE
 - ☒ 2. RAND
 - ☒ 3. POWER
 - ☒ 4. MEDIAN

Question ID : 264330180408
Option 1 ID : 264330707600
Option 2 ID : 264330707602
Option 3 ID : 264330707601
Option 4 ID : 264330707599
Status : Answered
Chosen Option : 3

Q.6 You have created a new document in MS Word 365 and you have made some changes to it. You want to save the document, but you also want to create a copy of it with a different name. Which of the following commands should you use?

- Ans
- ☒ 1. Save
 - ☒ 2. Open
 - ☒ 3. Save As
 - ☒ 4. Close

Question ID : 264330178582
Option 1 ID : 264330700355
Option 2 ID : 264330700358
Option 3 ID : 264330700356
Option 4 ID : 264330700357
Status : Answered
Chosen Option : 3

Q.7 _____ can help detect spelling and grammatical errors in Microsoft Word 365.

- Ans
- ☒ 1. Pressing 'F8'
 - ☒ 2. Pressing 'F7'
 - ☒ 3. Pressing 'Alt+ F8'
 - ☒ 4. Pressing 'Alt+ F7'

Question ID : 264330182082
Option 1 ID : 264330714169
Option 2 ID : 264330714167
Option 3 ID : 264330714170
Option 4 ID : 264330714168
Status : Answered
Chosen Option : 2

Q.8 In Microsoft Excel, letters of the alphabet are used to define which of the following?

- Ans
- ☒ 1. Sheet
 - ☒ 2. Row
 - ☒ 3. Column
 - ☒ 4. Table

Question ID : 264330182043
Option 1 ID : 264330714013
Option 2 ID : 264330714011
Option 3 ID : 264330714012
Option 4 ID : 264330714014
Status : Answered
Chosen Option : 3

Q.9 Any message you are writing until you send it or trash it, is called:

- Ans
- ☐ 1. Sent Mail
 - ☐ 2. Starred Mail
 - ☐ 3. Received Mail
 - ☒ 4. Draft Mail

Question ID : 264330175934

Option 1 ID : 264330690034

Option 2 ID : 264330690031

Option 3 ID : 264330690033

Option 4 ID : 264330690032

Status : Answered

Chosen Option : 4

Q.10 What action is performed by pressing the 'Delete' key on the keyboard in Microsoft Word 365?

- Ans
- ☒ 1. Removes the selected text
 - ☐ 2. Undo the last action
 - ☐ 3. Cuts the selected text
 - ☐ 4. Copies the selected text

Question ID : 264330173595

Option 1 ID : 264330680859

Option 2 ID : 264330680862

Option 3 ID : 264330680860

Option 4 ID : 264330680861

Status : Answered

Chosen Option : 1