

Constable Executive Male and Female in Delhi Police Examination 2023

Roll Number	
Candidate Name	
Venue Name	
Exam Date	17/11/2023
Exam Time	9:00 AM - 10:30 AM
Subject	Constable Executive Male and Female in Delhi Police Examination 2023

Section : General Knowledge

Q.1 Which of the following dates is correct with regard to the announcement of LPG model?

- Ans** ☒ 1. August 1991
☒ 2. July 1991
☒ 3. June 1991
☒ 4. December 1991

Question ID : 264330111610
Option 1 ID : 264330438528
Option 2 ID : 264330438526
Option 3 ID : 264330438527
Option 4 ID : 264330438525
Status : Answered
Chosen Option : 3

Q.2 Who among the following has written the novel 'Pinjar'?

- Ans** ☒ 1. Bhisham Sahani
☒ 2. Mohan Rakesh
☒ 3. Amrita Pritam
☒ 4. Mannu Bhandari

Question ID : 26433071476
Option 1 ID : 264330280329
Option 2 ID : 264330280330
Option 3 ID : 264330280328
Option 4 ID : 264330280331
Status : Answered
Chosen Option : 2

Q.3 The _____ was abruptly called off by Mahatma Gandhi due to the Chauri Chaura incident.

- Ans** ☒ 1. Kheda Movement
☒ 2. Rowlatt Act Satyagraha
☒ 3. Non-cooperation Movement
☒ 4. Champaran Satyagraha

Question ID : 264330114102
Option 1 ID : 264330448495
Option 2 ID : 264330448496
Option 3 ID : 264330448493
Option 4 ID : 264330448494
Status : Answered
Chosen Option : 4

Test Prime

**ALL EXAMS,
ONE SUBSCRIPTION**



70,000+
Mock Tests



**Personalised
Report Card**



**Unlimited
Re-Attempt**



600+
Exam Covered



**Previous Year
Papers**



**500%
Refund**



ATTEMPT FREE MOCK NOW

Q.4 Torrential rain is any amount of rain that is considered especially heavy. Accordingly, which of the following Indian regions receives this type of rainfall during October and November?

- Ans ☒ 1. Western Rajasthan
☒ 2. Southeast Karnataka
☒ 3. North Bengal
☒ 4. Central Maharashtra

Question ID : 264330114163
 Option 1 ID : 264330448739
 Option 2 ID : 264330448737
 Option 3 ID : 264330448740
 Option 4 ID : 264330448738
 Status : Not Answered
 Chosen Option : --

Q.5 Who among the following is known as the 'Shehnai maestro'?

- Ans ☒ 1. Ustad Bismillah Khan
☒ 2. Ustad Bade Ghulam Ali Khan
☒ 3. Hariprasad Chaurasia
☒ 4. Ustad Amjad Ali Khan

Question ID : 264330116424
 Option 1 ID : 264330457781
 Option 2 ID : 264330457782
 Option 3 ID : 264330457783
 Option 4 ID : 264330457784
 Status : Answered
 Chosen Option : 4

Q.6 Which of the following new words were added to Indian Constitution by the 42nd Constitutional Amendment Act?

- A. Socialist
 B. Integrity
 C. Fraternity
 D. Secular
 E. Equality

- Ans ☒ 1. A, D and E only
☒ 2. B, C and D only
☒ 3. A, B and D only
☒ 4. A, C and D only

Question ID : 264330114744
 Option 1 ID : 264330451062
 Option 2 ID : 264330451064
 Option 3 ID : 264330451061
 Option 4 ID : 264330451063
 Status : Answered
 Chosen Option : 3

Q.7 Small scale industries in 1950 were defined as all those industries in which the maximum investment was _____ lakh rupees.

- Ans
- ☒ 1. ten
 - ☒ 2. fifty
 - ☒ 3. five
 - ☒ 4. twenty

Question ID : 264330110173
 Option 1 ID : 264330432969
 Option 2 ID : 264330432971
 Option 3 ID : 264330432970
 Option 4 ID : 264330432972
 Status : Answered
 Chosen Option : 3

Q.8 What type of architecture was constructed in Hampi temples and palaces?

- Ans
- ☒ 1. Vesara
 - ☒ 2. Kalinga
 - ☒ 3. Nagara
 - ☒ 4. Dravidian

Question ID : 264330106241
 Option 1 ID : 264330417268
 Option 2 ID : 264330417267
 Option 3 ID : 264330417266
 Option 4 ID : 264330417265
 Status : Not Answered
 Chosen Option : --

Q.9 When the total expenditure is less than total receipts, it is called _____.

- Ans
- ☒ 1. surplus budget
 - ☒ 2. balanced budget
 - ☒ 3. deficit budget
 - ☒ 4. estimate budget

Question ID : 264330120861
 Option 1 ID : 264330473659
 Option 2 ID : 264330473661
 Option 3 ID : 264330473660
 Option 4 ID : 264330473662
 Status : Answered
 Chosen Option : 1

Q.10 Which Indian dance form is Darshana Jhaveri the leading exponent of?

- Ans
- ☒ 1. Odissi
 - ☒ 2. Kuchipudi
 - ☒ 3. Kathak
 - ☒ 4. Manipuri

Question ID : 26433086936
 Option 1 ID : 264330341386
 Option 2 ID : 264330341388
 Option 3 ID : 264330341387
 Option 4 ID : 264330341385
 Status : Not Answered
 Chosen Option : --

Q.11 Which of the following string instruments is played by Braj Bhushan Kabra?

- Ans ☒ 1. Mohan Veena
☒ 2. Sitar
☒ 3. Guitar
☒ 4. Violin

Question ID : 264330111945
Option 1 ID : 264330439868
Option 2 ID : 264330439867
Option 3 ID : 264330439866
Option 4 ID : 264330439865
Status : Not Answered
Chosen Option : --

Q.12 Which species of Arthropods is horseshoe shaped, with hard shell and spine-like tail?

- Ans ☒ 1. Loligo
☒ 2. Locusta
☒ 3. Limulus
☒ 4. Laccifer

Question ID : 264330166174
Option 1 ID : 264330651765
Option 2 ID : 264330651766
Option 3 ID : 264330651763
Option 4 ID : 264330651764
Status : Not Answered
Chosen Option : --

Q.13 Theyyam dance, performed to appease and make peace with the Gods who ensure good harvest and prosperity, is popular in which of the following states?

- Ans ☒ 1. Karnataka
☒ 2. Kerala
☒ 3. Jharkhand
☒ 4. Andhra Pradesh

Question ID : 264330110434
Option 1 ID : 264330434015
Option 2 ID : 264330434016
Option 3 ID : 264330434013
Option 4 ID : 264330434014
Status : Answered
Chosen Option : 4

Q.14 Which Article of the Indian Constitution provides for an Independent Election Commission for the superintendence, direction and control of the electoral roll and the conduct of elections in India?

- Ans ☒ 1. Article 320
☒ 2. Article 324
☒ 3. Article 323
☒ 4. Article 329

Question ID : 264330158676
Option 1 ID : 264330622063
Option 2 ID : 264330622065
Option 3 ID : 264330622064
Option 4 ID : 264330622066
Status : Answered
Chosen Option : 2

Q.15 Who among the following was the leader of 1857 revolt in Ramgarh state?

- Ans
- ☒ 1. Zinat Mahal
 - ☒ 2. Uda Devi
 - ☒ 3. Jhalkaribai
 - ☒ 4. Avantibai Lodhi

Question ID : 264330114114
 Option 1 ID : 264330448544
 Option 2 ID : 264330448541
 Option 3 ID : 264330448542
 Option 4 ID : 264330448543
 Status : Answered
 Chosen Option : 1

Q.16 The Green Revolution was commenced under the leadership of whom among the following Prime Ministers of India?

- Ans
- ☒ 1. Gulzarilal Nanda
 - ☒ 2. Charan Singh
 - ☒ 3. Morarji Desai
 - ☒ 4. Lal Bahadur Shastri

Question ID : 264330116532
 Option 1 ID : 264330458215
 Option 2 ID : 264330458214
 Option 3 ID : 264330458213
 Option 4 ID : 264330458216
 Status : Answered
 Chosen Option : 3

Q.17 In which case did the court rule that Parliament CANNOT amend the basic structure of the Constitution?

- Ans
- ☒ 1. Balbir Mehta Case
 - ☒ 2. Ashok Mehta Case
 - ☒ 3. Kesavananda Bharti Case
 - ☒ 4. Golaknath Case

Question ID : 264330168211
 Option 1 ID : 264330659721
 Option 2 ID : 264330659722
 Option 3 ID : 264330659719
 Option 4 ID : 264330659720
 Status : Answered
 Chosen Option : 3

Q.18 Who among the following headed the Constitutional States Committee formed for negotiating with the states?

- Ans
- ☒ 1. Dr. Rajendra Prasad
 - ☒ 2. Jawaharlal Nehru
 - ☒ 3. JB Kripalani
 - ☒ 4. Vallabhbhai Patel

Question ID : 264330113366
 Option 1 ID : 264330445549
 Option 2 ID : 264330445551
 Option 3 ID : 264330445552
 Option 4 ID : 264330445550
 Status : Answered
 Chosen Option : 4

Q.19 The Rohtasgarh or Rohtas Fort is located in which river valley?

- Ans ☒ 1. Son
☒ 2. Ganga
☒ 3. Karmanasa
☒ 4. Ghaghara

Question ID : 264330117687
 Option 1 ID : 264330462745
 Option 2 ID : 264330462743
 Option 3 ID : 264330462746
 Option 4 ID : 264330462744
 Status : Not Answered
 Chosen Option : --

Q.20 What is the integration between countries through foreign trade and foreign investments by multinational corporations (MNCs)?

- Ans ☒ 1. World trade
☒ 2. International trade
☒ 3. Globalisation
☒ 4. International investment

Question ID : 264330110002
 Option 1 ID : 264330432288
 Option 2 ID : 264330432285
 Option 3 ID : 264330432286
 Option 4 ID : 264330432287
 Status : Answered
 Chosen Option : 2

Q.21 Under which of the following Writs can the Supreme Court and the High Courts call for the record of a case from a lower court or semi-judicial body on an allegation of an excess of jurisdiction?

- Ans ☒ 1. Mandamus
☒ 2. Prohibition
☒ 3. Certiorari
☒ 4. Quo Warranto

Question ID : 264330134572
 Option 1 ID : 264330527244
 Option 2 ID : 264330527243
 Option 3 ID : 264330527246
 Option 4 ID : 264330527245
 Status : Answered
 Chosen Option : 2

Q.22 During the Mauryan period, Kalinga was the ancient name of which dominant present-day coastal state?

- Ans ☒ 1. Andhra Pradesh
☒ 2. Tamil Nadu
☒ 3. Odisha
☒ 4. Karnataka

Question ID : 264330183093
 Option 1 ID : 264330718104
 Option 2 ID : 264330718105
 Option 3 ID : 264330718106
 Option 4 ID : 264330718107
 Status : Answered
 Chosen Option : 2

Q.23 As of October 2022, in which of the following Harappan cities was the Citadel NOT walled off?

- Ans ☒ 1. Harappa
☒ 2. Lothal
☒ 3. Kalibangan
☒ 4. Mohenjo-Daro

Question ID : 264330109640
 Option 1 ID : 264330430837
 Option 2 ID : 264330430839
 Option 3 ID : 264330430840
 Option 4 ID : 264330430838
 Status : Answered
 Chosen Option : 3

Q.24 Who was the leader of the French forces during the second Carnatic War?

- Ans ☒ 1. John Ferro
☒ 2. Albert Newman
☒ 3. Daniel Samuel
☒ 4. Joseph Francois Dupleix

Question ID : 264330166873
 Option 1 ID : 264330654527
 Option 2 ID : 264330654530
 Option 3 ID : 264330654528
 Option 4 ID : 264330654529
 Status : Answered
 Chosen Option : 4

Q.25 Who among the following was the author of Buddhacharita?

- Ans ☒ 1. Jinasena
☒ 2. Shudraka
☒ 3. Dandin
☒ 4. Ashvaghosha

Question ID : 264330182699
 Option 1 ID : 264330716569
 Option 2 ID : 264330716568
 Option 3 ID : 264330716570
 Option 4 ID : 264330716567
 Status : Answered
 Chosen Option : 2

Q.26 The process of browning of sugar used extensively in cooking for the resulting sweet nutty flavour and brown colour is called:

- Ans
- ☒ 1. pasteurisation
 - ☒ 2. neutralisation
 - ☒ 3. sterilisation
 - ☒ 4. caramelisation

Question ID : 264330111908
 Option 1 ID : 264330439720
 Option 2 ID : 264330439717
 Option 3 ID : 264330439718
 Option 4 ID : 264330439719
 Status : Answered
 Chosen Option : 4

Q.27 In which state is the Seshachalam Biosphere Reserve located?

- Ans
- ☒ 1. Andhra Pradesh
 - ☒ 2. Maharashtra
 - ☒ 3. Gujarat
 - ☒ 4. Tamil Nadu

Question ID : 264330173629
 Option 1 ID : 264330680996
 Option 2 ID : 264330680997
 Option 3 ID : 264330680995
 Option 4 ID : 264330680998
 Status : Answered
 Chosen Option : 1

Q.28 The term 'anchor runner' is related to _____.

- Ans
- ☒ 1. steeple chase
 - ☒ 2. 1500 m race
 - ☒ 3. relay race
 - ☒ 4. marathon race

Question ID : 264330110394
 Option 1 ID : 264330433856
 Option 2 ID : 264330433854
 Option 3 ID : 264330433855
 Option 4 ID : 264330433853
 Status : Answered
 Chosen Option : 3

Q.29 Olympian boxer Vijender Singh belongs to which of the following states?

- Ans
- ☒ 1. Haryana
 - ☒ 2. Chandigarh
 - ☒ 3. Delhi
 - ☒ 4. Punjab

Question ID : 264330118440
 Option 1 ID : 264330465162
 Option 2 ID : 264330465164
 Option 3 ID : 264330465161
 Option 4 ID : 264330465163
 Status : Answered
 Chosen Option : 1

Q.30 As of the December 2022, which of the following cities of India was NOT a Railway Zone?

- Ans ☒ 1. Hajipur
☒ 2. Bilaspur
☒ 3. Jabalpur
☒ 4. Udaipur

Question ID : 264330178720
 Option 1 ID : 264330700907
 Option 2 ID : 264330700908
 Option 3 ID : 264330700910
 Option 4 ID : 264330700909
 Status : Answered
 Chosen Option : 1

Q.31 Who among the following personalities is an awardee of Sahitya Natak Akademi for his contribution to the Chhau dance?

- Ans ☒ 1. Chandra Shekhar Bhanj
☒ 2. Radha Reddy
☒ 3. Reba Vidyarthi
☒ 4. Chandralekha

Question ID : 264330120412
 Option 1 ID : 264330471902
 Option 2 ID : 264330471899
 Option 3 ID : 264330471901
 Option 4 ID : 264330471900
 Status : Answered
 Chosen Option : 1

Q.32 Maintenance functions of a living organism is a _____ process.

- Ans ☒ 1. continuous
☒ 2. long time
☒ 3. one time
☒ 4. short time

Question ID : 264330113323
 Option 1 ID : 264330445380
 Option 2 ID : 264330445379
 Option 3 ID : 264330445377
 Option 4 ID : 264330445378
 Status : Answered
 Chosen Option : 1

Q.33 The first Indian Factories Act 1881 was mainly related to which subject?

- Ans ☒ 1. Child labour
☒ 2. Woman labour
☒ 3. Wages rate
☒ 4. Equal work equal pay

Question ID : 264330114040
 Option 1 ID : 264330448246
 Option 2 ID : 264330448245
 Option 3 ID : 264330448247
 Option 4 ID : 264330448248
 Status : Answered
 Chosen Option : 1

Q.34 According to the census of India 2011, which of the following religions has the least population?

- Ans ☒ 1. Christians
☒ 2. Buddhists
☒ 3. Jains
☒ 4. Sikhs

Question ID : 264330120329
 Option 1 ID : 264330471567
 Option 2 ID : 264330471569
 Option 3 ID : 264330471568
 Option 4 ID : 264330471570
 Status : Answered
 Chosen Option : 2

Q.35 The term 'scoop' is related to which of the following games?

- Ans ☒ 1. Boxing
☒ 2. Hockey
☒ 3. Badminton
☒ 4. Football

Question ID : 264330130642
 Option 1 ID : 264330511680
 Option 2 ID : 264330511679
 Option 3 ID : 264330511682
 Option 4 ID : 264330511681
 Status : Answered
 Chosen Option : 2

Q.36 Secunderabad is the headquarters of which railway zone?

- Ans ☒ 1. West Central Railway Zone
☒ 2. Southern Railway Zone
☒ 3. North Central Railway Zone
☒ 4. South Central Railway Zone

Question ID : 264330178718
 Option 1 ID : 264330700900
 Option 2 ID : 264330700899
 Option 3 ID : 264330700902
 Option 4 ID : 264330700901
 Status : Not Answered
 Chosen Option : --

Q.37 'As I Lay Dying' is an English novel by which of the following authors?

- Ans ☒ 1. William Faulkner
☒ 2. John Dos Passos
☒ 3. Stella Gibbons
☒ 4. Aldous Huxley

Question ID : 26433055377
 Option 1 ID : 264330216495
 Option 2 ID : 264330216492
 Option 3 ID : 264330216493
 Option 4 ID : 264330216494
 Status : Not Answered
 Chosen Option : --

Q.38 According to Census of India 2011, which of the following states recorded a population density of less than 100 persons/sq. km?

- Ans ☒ 1. Rajasthan
☒ 2. Sikkim
☒ 3. Odisha
☒ 4. Assam

Question ID : 264330183157
 Option 1 ID : 264330718363
 Option 2 ID : 264330718362
 Option 3 ID : 264330718360
 Option 4 ID : 264330718361
 Status : Answered
 Chosen Option : 2

Q.39 At which of the following events did Punjab's Devansh Jagga break the national record in the Under-16 Discus Throw Competition?

- Ans ☒ 1. 34th AFI National Junior Athletics Championship
☒ 2. 35th AFI National Junior Athletics Championship
☒ 3. 36th AFI National Junior Athletics Championship
☒ 4. 37th AFI National Junior Athletics Championship

Question ID : 264330113745
 Option 1 ID : 264330447067
 Option 2 ID : 264330447066
 Option 3 ID : 264330447065
 Option 4 ID : 264330447068
 Status : Answered
 Chosen Option : 3

Q.40 What is the range of temperature on the surface of the Moon with no atmosphere?

- Ans ☒ 1. -110°C to 190°C
☒ 2. -190°C to 110°C
☒ 3. -80°C to 150°C
☒ 4. -50°C to 120°C

Question ID : 264330134895
 Option 1 ID : 264330528516
 Option 2 ID : 264330528515
 Option 3 ID : 264330528517
 Option 4 ID : 264330528518
 Status : Answered
 Chosen Option : 3

Q.41 Which committee was appointed by the Government of India "to operationalise the suggestions to teach Fundamental Duties to the citizens of India" ?

- Ans ☒ 1. Justice BN Srikrishna Committee
☒ 2. Justice Usha Mehra Committee
☒ 3. Justice AK Mathur Committee
☒ 4. Justice JS Verma Committee

Question ID : 264330110035
 Option 1 ID : 264330432420
 Option 2 ID : 264330432418
 Option 3 ID : 264330432419
 Option 4 ID : 264330432417
 Status : Answered
 Chosen Option : 1

Q.42 When is Kali Pooja celebrated in West Bengal region?

- Ans ☒ 1. Kartika Amavasya
☒ 2. Kartika Poornima
☒ 3. Ashwin Amavasya
☒ 4. Ashwin Poornima

Question ID : 264330110466
 Option 1 ID : 264330434143
 Option 2 ID : 264330434142
 Option 3 ID : 264330434141
 Option 4 ID : 264330434144
 Status : Answered
 Chosen Option : 2

Q.43 To remove unemployment through skill development, how much expenditure is permissible per person on training of the urban poor, under the Deen Dayal Antyodaya Yojana?

- Ans ☒ 1. ₹12,000
☒ 2. ₹20,000
☒ 3. ₹8,000
☒ 4. ₹15,000

Question ID : 264330120380
 Option 1 ID : 264330471774
 Option 2 ID : 264330471773
 Option 3 ID : 264330471771
 Option 4 ID : 264330471772
 Status : Answered
 Chosen Option : 1

Q.44 A reaction wherein atoms of an element in the reactants are exchanged or replaced to form new elements in the product is called:

- Ans ☒ 1. oxidation
☒ 2. addition reaction
☒ 3. substitution reaction
☒ 4. combustion

Question ID : 264330177016
 Option 1 ID : 264330694261
 Option 2 ID : 264330694259
 Option 3 ID : 264330694260
 Option 4 ID : 264330694262
 Status : Answered
 Chosen Option : 3

Q.45 Which of the following concepts refers to the income earned by the factors of production at factor cost in the form of wages, profits, rent, interest, etc., within the domestic territory of a country?

- Ans
- ☒ 1. Net Domestic Product at Market Prices
 - ☒ 2. Net Domestic Product at Factor Cost
 - ☒ 3. Gross Domestic Product at Market Prices
 - ☒ 4. Gross National Product at Factor Cost

Question ID : 264330111569
 Option 1 ID : 264330438362
 Option 2 ID : 264330438364
 Option 3 ID : 264330438361
 Option 4 ID : 264330438363
 Status : Answered
 Chosen Option : 2

Q.46 The Speaker and the Deputy Speaker of a state are elected by the _____.

- Ans
- ☒ 1. Attorney General
 - ☒ 2. Chief Justice of Supreme Court
 - ☒ 3. Members of the Legislative Assembly
 - ☒ 4. Chief Justice of High Court

Question ID : 26433086865
 Option 1 ID : 264330341104
 Option 2 ID : 264330341101
 Option 3 ID : 264330341103
 Option 4 ID : 264330341102
 Status : Answered
 Chosen Option : 3

Q.47 Who among the following Sultans of Delhi established Turkan-i-Chahalgani?

- Ans
- ☒ 1. Ghiyasuddin Balban
 - ☒ 2. Bhalol Lodhi
 - ☒ 3. Iltutmish
 - ☒ 4. Alauddin Khilji

Question ID : 264330114828
 Option 1 ID : 264330451398
 Option 2 ID : 264330451399
 Option 3 ID : 264330451397
 Option 4 ID : 264330451400
 Status : Not Answered
 Chosen Option : --

Q.48 Yamini Krishnamurthy, an eminent _____ and Bharatanatyam dancer has been awarded the Padma Bhushan and Padma Shri.

- Ans
- ☒ 1. Kathakali
 - ☒ 2. Kuchipudi
 - ☒ 3. Kathak
 - ☒ 4. Sattriya

Question ID : 264330111980
 Option 1 ID : 264330440006
 Option 2 ID : 264330440007
 Option 3 ID : 264330440005
 Option 4 ID : 264330440008
 Status : Answered
 Chosen Option : 1

Q.49 'Azadi ka Amrit Mahotsav' started how many weeks before the 15th August 2023 celebration?

- Ans** ☒ 1. 75 weeks
☐ 2. 25 weeks
☐ 3. 50 weeks
☐ 4. 100 weeks

Question ID : 264330141784
 Option 1 ID : 264330555458
 Option 2 ID : 264330555455
 Option 3 ID : 264330555457
 Option 4 ID : 264330555456
 Status : Answered
 Chosen Option : 2

Q.50 Which ministry is implementing the 'PM DAKSH' scheme?

- Ans** ☐ 1. Ministry of Finance
☒ 2. Ministry of Social Justice and Empowerment
☐ 3. Ministry of Micro, Small and Medium Enterprises
☐ 4. Ministry of Education

Question ID : 264330111586
 Option 1 ID : 264330438430
 Option 2 ID : 264330438432
 Option 3 ID : 264330438431
 Option 4 ID : 264330438429
 Status : Answered
 Chosen Option : 2

Section : Reasoning

Q.1 Which of the following terms will replace the question mark (?) in the given series?
 GOM, INO, KMQ, MLS, ?

- Ans** ☐ 1. OJV
☐ 2. NKV
☐ 3. NJU
☒ 4. OKU

Question ID : 264330102178
 Option 1 ID : 264330401179
 Option 2 ID : 264330401178
 Option 3 ID : 264330401180
 Option 4 ID : 264330401177
 Status : Answered
 Chosen Option : 4

Q.2 Select the option that is related to the third word in the same way as the second word is related to the first word. (The words must be considered as meaningful English words and must NOT be related to each other based on the number of letters/number of consonants/vowels in the word)
Swing : Garden :: Stars : ?

- Ans ☒ 1. Sky
☒ 2. Camera
☒ 3. Light
☒ 4. Sun

Question ID : 26433069138
Option 1 ID : 264330271064
Option 2 ID : 264330271065
Option 3 ID : 264330271067
Option 4 ID : 264330271066
Status : Answered
Chosen Option : 1

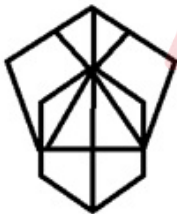
Q.3 Select the number from among the given options that can replace the question mark (?) in the following series.

1, 13, 85, 517, 3109, ?

- Ans ☒ 1. 31456
☒ 2. 19834
☒ 3. 18661
☒ 4. 18000

Question ID : 264330109746
Option 1 ID : 264330431264
Option 2 ID : 264330431262
Option 3 ID : 264330431263
Option 4 ID : 264330431261
Status : Answered
Chosen Option : 3


Q.4 How many triangles are there in the given figure?



- Ans ☒ 1. 4
☒ 2. 5
☒ 3. 6
☒ 4. 7

Question ID : 26433085410
Option 1 ID : 264330335341
Option 2 ID : 264330335343
Option 3 ID : 264330335344
Option 4 ID : 264330335342
Status : Answered
Chosen Option : 4

Q.5 Select the correct mirror image of the given figure when the mirror is placed at PQ as shown below.

ARC(-=ANE_? 

Ans

- ☒ 1. ARC(-=ANE_?
- ☒ 2. ARC(-=ANE_?
- ☒ 3. ARC(-=ANE_?
- ☒ 4. ARC(-=ANE_?

Question ID : 26433082030

Option 1 ID : 264330321956


Option 2 ID : 264330321954

Option 3 ID : 264330321953

Option 4 ID : 264330321955

Status : Answered

Chosen Option : 2



Q.6 Which figure should replace the question mark (?) in the following series to continue the pattern?

N C E R S T	V R N V C S	T E C V N T	R N E R C S	T T V S	?
----------------------------	----------------------------	----------------------------	----------------------------	------------------	---

Ans

✗ 1.

V C E R S T	N
----------------------------	---

✗ 2.

T C E R N V	S
----------------------------	---

✗ 3.

S N E R T C	V
----------------------------	---

✓ 4.

V C R E S T	N
----------------------------	---

Question ID : 264330129631

Option 1 ID : 264330507892

Option 2 ID : 264330507891

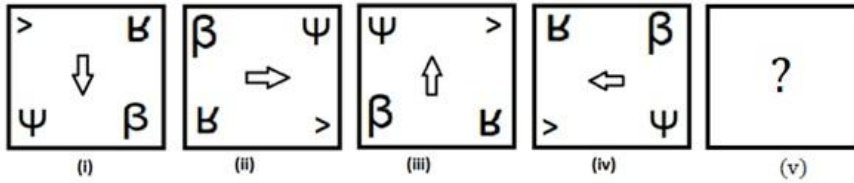
Option 3 ID : 264330507893

Option 4 ID : 264330507890

Status : Answered

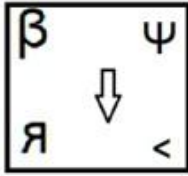
Chosen Option : 4

Q.7 Select the figure from among the given options that can replace the question mark (?) in the following series.

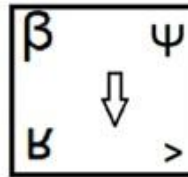


Ans

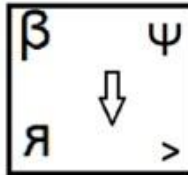
✗ 1.



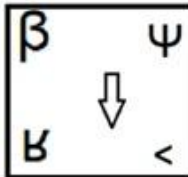
✓ 2.



✗ 3.



✗ 4.



Question ID : 264330106546

Option 1 ID : 264330418487

Option 2 ID : 264330418485

Option 3 ID : 264330418486

Option 4 ID : 264330418488

Status : Answered

Chosen Option : 2

Q.8 Select the correct combination of mathematical signs to sequentially replace the * signs and to balance the given equation.
 $20 * 96 * 66 * 11 * 10 * 56$

Ans

✓ 1. +, -, +, x, =

✗ 2. +, -, +, =, x

✗ 3. -, x, +, +, =

✗ 4. -, +, +, x, =

Question ID : 26433076556

Option 1 ID : 264330300289

Option 2 ID : 264330300288

Option 3 ID : 264330300291

Option 4 ID : 264330300290

Status : Answered

Chosen Option : 1

Q.9 D, E, F, G, H, J and K were sitting in a straight row, facing north. J was exactly between H and E. Only K was to the right of F. Only G was to the left of D. H was to the immediate left of F. Who was to the immediate right of D?

- Ans
1. H

2. J

3. F

4. E

Question ID : 26433087017
Option 1 ID : 264330341711
Option 2 ID : 264330341709
Option 3 ID : 264330341712
Option 4 ID : 264330341710
Status : Answered
Chosen Option : 4

Q.10 Which figure should replace the question mark (?) if the following series were to be continued?

V			E			S			V			E			?
B	E	U	W	U	V	U	V	W	B	W	S	W	S	B	
S		W	B		S	E		B	U		E	V		U	

- Ans
1.

U

S

B

W

E

V

2.

V

S

B

W

E

U

3.

S

U

B

E

W

V

4.

E

S

U

B

W

V

Question ID : 264330103910
Option 1 ID : 264330407942
Option 2 ID : 264330407944
Option 3 ID : 264330407941
Option 4 ID : 264330407943
Status : Answered
Chosen Option : 3

Q.11 Select the set in which the numbers are related in the same way as are the numbers of the given sets.

(NOTE: Operations should be performed on the whole numbers, without breaking down the numbers into its constituent digits. E.g., 13 – Operations on 13 such as adding/ deleting/ multiplying etc. to 13 can be performed. Breaking down 13 into 1 and 3 and then performing mathematical operations on 1 and 3 is not allowed.

(428, 150, 278)

(401, 139, 262)

Ans  1. (389, 183, 206)

 2. (349, 145, 206)

 3. (191, 891, 118)

 4. (245, 213, 122)

Question ID : 264330178752

Option 1 ID : 264330701038

Option 2 ID : 264330701036

Option 3 ID : 264330701037

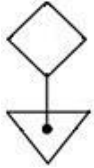
Option 4 ID : 264330701035

Status : Answered

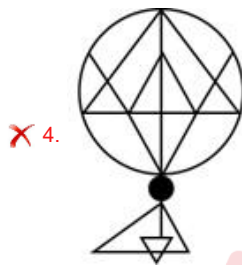
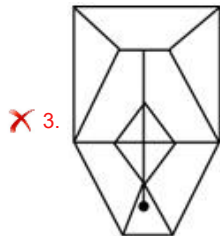
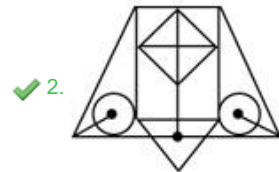
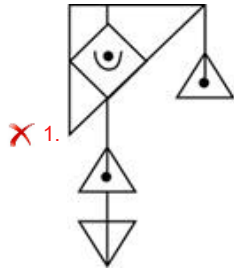
Chosen Option : 1



Q.12 Select the option in which the given figure is embedded (rotation is NOT allowed).



Ans



Question ID : 264330114682

Option 1 ID : 264330450814

Option 2 ID : 264330450813

Option 3 ID : 264330450815

Option 4 ID : 264330450816

Status : Answered

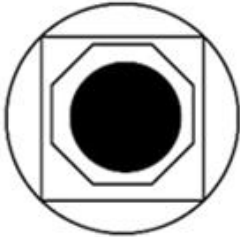
Chosen Option : 2

Q.13 Select the option figure in which the given figure is embedded as its part (rotation is NOT allowed).

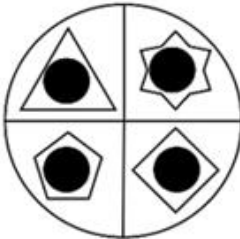


Ans

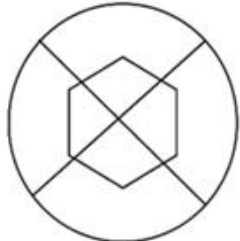
✗ 1.



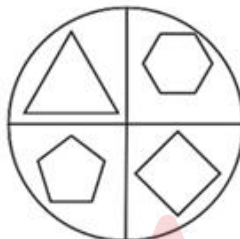
✗ 2.



✗ 3.



✓ 4.



Question ID : 264330118228

Option 1 ID : 264330464728

Option 2 ID : 264330464729

Option 3 ID : 264330464730

Option 4 ID : 264330464727

Status : Answered

Chosen Option : 4

Q.14 Six numbers, 1, 2, 3, 4, 5 and 6, are written on the different faces of a dice. Three different positions of the same dice are shown (Figures 1-3). Find the number on the face opposite to the face showing '3'.

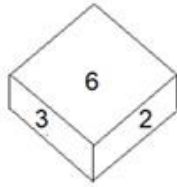


Figure 1

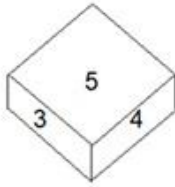


Figure 2

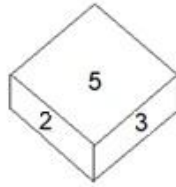


Figure 3

- Ans
- ☒ 1. 4
 - ☒ 2. 2
 - ☒ 3. 1
 - ☒ 4. 5

Question ID : 264330112583

Option 1 ID : 264330442419

Option 2 ID : 264330442420

Option 3 ID : 264330442418

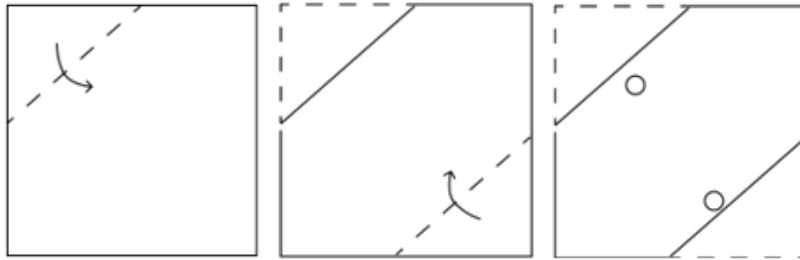
Option 4 ID : 264330442417

Status : Answered

Chosen Option : 3

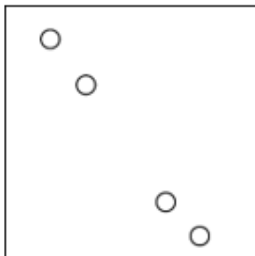


Q.15 A square sheet of paper is folded along the dotted line successively along the directions shown and is then punched in the last. How would the paper look when unfolded?

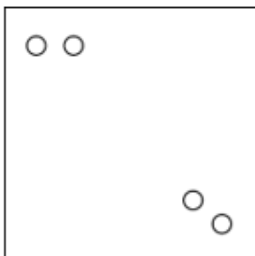


Ans

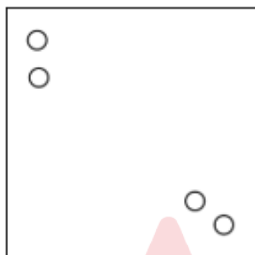
✓ 1.



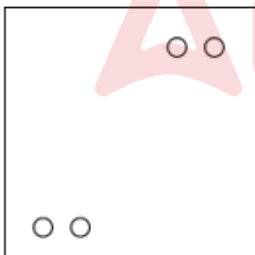
✗ 2.



✗ 3.



✗ 4.



Question ID : 264330172413

Option 1 ID : 264330676206

Option 2 ID : 264330676203

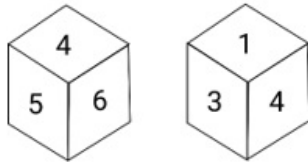
Option 3 ID : 264330676204

Option 4 ID : 264330676205

Status : Answered

Chosen Option : 1

Q.16 Six numbers 1, 2, 3, 4, 5 and 6 are written on different faces of a dice. Two positions of this dice are shown in the figure. Find the number on the face opposite to '2'.



Ans ☒ 1. 5
☒ 2. 4
☒ 3. 6
☒ 4. 3

Question ID : 26433076506
 Option 1 ID : 264330300089
 Option 2 ID : 264330300090
 Option 3 ID : 264330300091
 Option 4 ID : 264330300088

Status : Answered

Chosen Option : 2

Q.17 Select a figure from amongst the four given options which, when placed in the blank space of figure (X), would complete the pattern.



X

Ans

☒ 1.



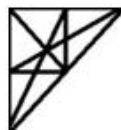
☒ 2.



☒ 3.



☒ 4.



Question ID : 264330102210
 Option 1 ID : 264330401306
 Option 2 ID : 264330401307
 Option 3 ID : 264330401305
 Option 4 ID : 264330401308

Status : Answered

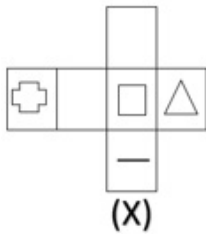
Chosen Option : 4

Q.18 Select the option that is related to the fourth term in the same way as the first term is related to the second term and the fifth term is related to the sixth term.
98 : 9 :: ? : 13 :: 458 : 21

- Ans
- ☒ 1. 168
 - ☒ 2. 158
 - ☒ 3. 185
 - ☒ 4. 186

Question ID : 26433052095
Option 1 ID : 264330203685
Option 2 ID : 264330203683
Option 3 ID : 264330203682
Option 4 ID : 264330203684
Status : Answered
Chosen Option : 4

Q.19 Choose the dice from the given options that is similar to the dice formed from the given sheet of paper (X).



Ans

- ☒ 1.
- ☒ 2.
- ☒ 3.
- ☒ 4.

Question ID : 264330111294
Option 1 ID : 264330437263
Option 2 ID : 264330437262
Option 3 ID : 264330437261
Option 4 ID : 264330437264
Status : Answered
Chosen Option : 2

Q.20 Which of the following interchanges of signs would make the given equation correct?
 $7 - 4 \times 40 \div 5 + 6 = 51$

- Ans
- ☒ 1. - and +
 - ☒ 2. \div and \times
 - ☒ 3. - and \times
 - ☒ 4. + and \times

Question ID : 26433085653
 Option 1 ID : 264330336314
 Option 2 ID : 264330336313
 Option 3 ID : 264330336315
 Option 4 ID : 264330336316
 Status : Answered
 Chosen Option : 4

Q.21 Two statements are given followed by two conclusions numbered I and II. Assuming the statements to be true, even if they seem to be at variance from commonly known facts, decide which of the conclusions logically follow(s) from the statements.

Statements:

Some Bags are Waters.

All Waters are Liquids.

Conclusions:

I. Some Liquids are Bags.

II. All Bags are Liquids.

- Ans
- ☒ 1. Only conclusion II follows.
 - ☒ 2. Both conclusions I and II follow.
 - ☒ 3. Only conclusion I follows.
 - ☒ 4. Neither conclusion I nor II follows.

Question ID : 26433076593
 Option 1 ID : 264330300437
 Option 2 ID : 264330300438
 Option 3 ID : 264330300436
 Option 4 ID : 264330300439
 Status : Answered
 Chosen Option : 3

Q.22 In a certain code language, 'BELONG' is written as 'DVTLRT' and 'STUDIO' is written as 'MGKWWL'. How will 'UPDATE' be written as in that language?

- Ans
- ☒ 1. KPRBUS
 - ☒ 2. KLRZBL
 - ☒ 3. KJLDFO
 - ☒ 4. KKBZLV

Question ID : 26433082949
 Option 1 ID : 264330325632
 Option 2 ID : 264330325631
 Option 3 ID : 264330325629
 Option 4 ID : 264330325630
 Status : Not Answered
 Chosen Option : --

Q.23 1, 2, 3, 4, 5 and 6 are written on different faces of a dice. Three different positions of the same dice are shown below. Find the number on the face opposite to the one showing '6'.

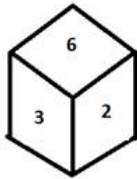


figure 1

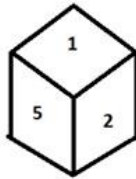


figure 2

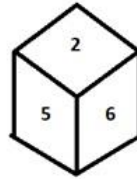


figure 3

- Ans
- ☒ 1. 5
 - ☒ 2. 4
 - ☒ 3. 1
 - ☒ 4. 2

Question ID : 264330110550

Option 1 ID : 264330434477

Option 2 ID : 264330434479

Option 3 ID : 264330434478

Option 4 ID : 264330434480

Status : Answered

Chosen Option : 3

Q.24 Select the correct mirror image of the given figure when the mirror is placed at PQ as shown below.



- Ans
- ☒ 1. x w 7 B k B 2 3 F
 - ☒ 2. F 3 2 q k B 7 w x
 - ☒ 3. x w 7 B k B 2 3 F
 - ☒ 4. x w 7 B k B 2 3 F

Question ID : 26433080784

Option 1 ID : 264330317069

Option 2 ID : 264330317070

Option 3 ID : 264330317072

Option 4 ID : 264330317071

Status : Answered

Chosen Option : 1

Q.25 Select the correct mirror image of the given combination when the mirror is placed at MN as shown below.

L 3 e 2 v d z

M
|
N

Ans

- ✓ 1. z b v 5 e 3 J
- ✗ 2. z b v 2 e 3 J
- ✗ 3. z 5 e 2 7 8 b J
- ✗ 4. z 5 e 3 5 v b J

Question ID : 264330117001

Option 1 ID : 264330460088

Option 2 ID : 264330460085

Option 3 ID : 264330460087

Option 4 ID : 264330460086

Status : Answered

Chosen Option : 1

Section : Numerical Ability

Q.1 The curved surface area of a right circular cone of radius 21 cm is 1518 cm^2 . What is the slant height of the cone? (Use $\pi = \frac{22}{7}$)

- Ans
- ✗ 1. 21 cm
- ✗ 2. 25 cm
- ✓ 3. 23 cm
- ✗ 4. 27 cm

Question ID : 264330119371

Option 1 ID : 264330467773

Option 2 ID : 264330467774

Option 3 ID : 264330467772

Option 4 ID : 264330467771

Status : Answered

Chosen Option : 3

Q.2 An amount of ₹2,500 is divided into two parts in such a way that, if one part is put out at 5% p.a. simple interest and the other at 6% p.a., then the yearly annual interest will be ₹140. How much is lent at 5% p.a.?

- Ans
- ✗ 1. ₹500
- ✓ 2. ₹1,000
- ✗ 3. ₹2,000
- ✗ 4. ₹1,500

Question ID : 264330182531

Option 1 ID : 264330715915

Option 2 ID : 264330715916

Option 3 ID : 264330715918

Option 4 ID : 264330715917

Status : Answered

Chosen Option : 2

Q.3 A man invests ₹5,000 for 3 years at compound interest. After one year, the money amounts to ₹5,450. What will be the amount (to the nearest rupee) due at the end of 3 years?

- Ans ☒ 1. ₹6,475
☒ 2. ₹5,575
☒ 3. ₹7,405
☒ 4. ₹6,970

Question ID : 264330104360

Option 1 ID : 264330409743

Option 2 ID : 264330409744

Option 3 ID : 264330409741

Option 4 ID : 264330409742

Status : Answered

Chosen Option : 1

Q.4 A shopkeeper offers a scheme on the purchase of shirts: 'Buy two, get one free of the same kind'. The cost price of one shirt is ₹300. What should be the selling price (in ₹) of one shirt if he wants to earn 30% profit?

- Ans ☒ 1. 585
☒ 2. 535
☒ 3. 485
☒ 4. 435

Question ID : 264330183843

Option 1 ID : 264330721048

Option 2 ID : 264330721049

Option 3 ID : 264330721050

Option 4 ID : 264330721051

Status : Answered

Chosen Option : 1

Q.5 The average of the marks of Ram, Ramesh, Somesh and Soham in mathematics is 75, and the average of the marks of Ramesh, Somesh, Soham and Mohan in mathematics is 80. The marks scored by Mohan alone in mathematics is 70. Find the marks scored by Ram alone in mathematics.

- Ans ☒ 1. 50
☒ 2. 78
☒ 3. 62
☒ 4. 45

Question ID : 264330130065

Option 1 ID : 264330509492

Option 2 ID : 264330509494

Option 3 ID : 264330509493

Option 4 ID : 264330509491

Status : Answered

Chosen Option : 1

Q.6 12 फुट लम्बे वर्गाकार बोर्ड की एक भुजा से 4 फुट लम्बाई का एक टुकड़ा काटा जाता है। बोर्ड के क्षेत्रफल में कितने प्रतिशत की कमी होती है?

- Ans
- ☒ 1. 30.33%
 - ☒ 2. 13.33%
 - ☒ 3. 27.27%
 - ☒ 4. 33.33%

Question ID : 264330131347
 Option 1 ID : 264330514500
 Option 2 ID : 264330514501
 Option 3 ID : 264330514499
 Option 4 ID : 264330514502
 Status : Answered
 Chosen Option : 4

Q.7 The number of prime numbers which are greater than 100 and less than 150 is:

- Ans
- ☒ 1. 8
 - ☒ 2. 11
 - ☒ 3. 10
 - ☒ 4. 9

Question ID : 264330104482
 Option 1 ID : 264330410232
 Option 2 ID : 264330410231
 Option 3 ID : 264330410230
 Option 4 ID : 264330410229
 Status : Answered
 Chosen Option : 3

Q.8 Raju lost 13% by selling a radio set for ₹4,524. What percentage of profit would he have earned by selling it for ₹6,400 (rounded off to two decimal places)?

- Ans
- ☒ 1. 25.25%
 - ☒ 2. 28.52%
 - ☒ 3. 21.05%
 - ☒ 4. 23.08%

Question ID : 264330131517
 Option 1 ID : 264330515172
 Option 2 ID : 264330515171
 Option 3 ID : 264330515174
 Option 4 ID : 264330515173
 Status : Answered
 Chosen Option : 3

Q.9 If the diameter of a circle is increased by 24%, then the percentage increase in the area is:

- Ans
- ☒ 1. 50.46%
 - ☒ 2. 53.76%
 - ☒ 3. 48.28%
 - ☒ 4. 64.34%

Question ID : 264330103696

Option 1 ID : 264330407092

Option 2 ID : 264330407090

Option 3 ID : 264330407089

Option 4 ID : 264330407091

Status : Answered

Chosen Option : 2

Q.10 The diameter of a solid cylinder is 28 cm and its height is 20 cm Find the total surface area (in cm^2) of the cylinder. (Use $\pi = \frac{22}{7}$)

- Ans
- ☒ 1. 2992
 - ☒ 2. 2991
 - ☒ 3. 2990
 - ☒ 4. 2993

Question ID : 264330109545

Option 1 ID : 264330430459

Option 2 ID : 264330430458

Option 3 ID : 264330430457

Option 4 ID : 264330430460

Status : Answered

Chosen Option : 1

Q.11 In a circular race on a track of length 2000 m, X and Y start from the same point at the same time in opposite direction at the speeds of 15 km/h and 33 km/h, respectively. After how much time will they meet next?

- Ans
- ☒ 1. 400 sec
 - ☒ 2. 250 sec
 - ☒ 3. 300 sec
 - ☒ 4. 275 sec

Question ID : 264330183826

Option 1 ID : 264330720980

Option 2 ID : 264330720981

Option 3 ID : 264330720982

Option 4 ID : 264330720983

Status : Answered

Chosen Option : 1

Q.12 The sum of three prime numbers is 72. If one of them exceeds another by 24, then one of the numbers is:

- Ans ☒ 1. 47
☒ 2. 29
☒ 3. 37
☒ 4. 31

Question ID : 264330109530
Option 1 ID : 264330430400
Option 2 ID : 264330430397
Option 3 ID : 264330430399
Option 4 ID : 264330430398
Status : Answered
Chosen Option : 1

Q.13 The value of $\frac{(11.12)^2 - (8.12)^2}{(0.3)^2 + (0.3)(18.94)}$ is:

- Ans ☒ 1. 10
☒ 2. 100
☒ 3. 1
☒ 4. 0.1

Question ID : 264330103653
Option 1 ID : 264330406918
Option 2 ID : 264330406917
Option 3 ID : 264330406920
Option 4 ID : 264330406919
Status : Answered
Chosen Option : 1

Q.14 Dileep and Rajesh can complete a work separately in 20 days and 30 days, respectively. In how many days will the entire work be completed, if they work on an alternate basis, starting with Rajesh?

- Ans ☒ 1. 28
☒ 2. 22
☒ 3. 12
☒ 4. 24

Question ID : 264330103996
Option 1 ID : 264330408288
Option 2 ID : 264330408286
Option 3 ID : 264330408285
Option 4 ID : 264330408287
Status : Answered
Chosen Option : 3

Q.15 If $\frac{1}{a} : \frac{1}{b} : \frac{1}{c} = 2 : 3 : 5$, then $a : b : c$ is equal to:

- Ans
- ☒ 1. 2 : 4 : 5
 - ☒ 2. 6 : 10 : 15
 - ☒ 3. 15 : 10 : 6
 - ☒ 4. 15 : 10 : 12

Question ID : 264330106075
 Option 1 ID : 264330416604
 Option 2 ID : 264330416601
 Option 3 ID : 264330416602
 Option 4 ID : 264330416603
 Status : Answered
 Chosen Option : 3

Section : Computer Proficiency

Q.1 Which of the following statements is INCORRECT related to sorting emails in Gmail?

- Ans
- ☒ 1. Sorting mail can help us remove unwanted emails from your inbox and more easily unsubscribe from mailings we don't need.
 - ☒ 2. Depending on what we use your email address for, sorting emails can also help you keep track of trends and correspondence by looking at messages sorted by specific criteria.
 - ☒ 3. We can sort emails by a variety of factors, like the topic, sender, size, or age of the message.
 - ☒ 4. Sorting mail cannot help us remove unwanted emails from our inboxes and more easily unsubscribe from mailings we don't need.

Question ID : 264330178244
 Option 1 ID : 264330699033
 Option 2 ID : 264330699032
 Option 3 ID : 264330699031
 Option 4 ID : 264330699034
 Status : Answered
 Chosen Option : 4

Q.2 _____ involves using a smartphone's data connection to provide internet access to other devices such as laptops or tablets.

- Ans
- ☒ 1. Satellite
 - ☒ 2. Dial up
 - ☒ 3. Wi-Fi
 - ☒ 4. Tethering

Question ID : 264330180803
 Option 1 ID : 264330709176
 Option 2 ID : 264330709177
 Option 3 ID : 264330709175
 Option 4 ID : 264330709178
 Status : Answered
 Chosen Option : 4

Q.3 What does the 'Paste' command do in Microsoft Word 365?

- Ans
- ☐ 1. Deletes the content of the clipboard
 - ☒ 2. Inserts the content from the clipboard into the document
 - ☐ 3. Removes the selected text
 - ☐ 4. Copies the selected text to the clipboard

Question ID : 264330180737
 Option 1 ID : 264330708918
 Option 2 ID : 264330708917
 Option 3 ID : 264330708915
 Option 4 ID : 264330708916
 Status : Answered
 Chosen Option : 2

Q.4 Which Microsoft Excel 365 function calculates the average of a range of numbers?

- Ans
- ☐ 1. AVG
 - ☐ 2. MEDIAN
 - ☒ 3. AVERAGE
 - ☐ 4. MEAN

Question ID : 264330180689
 Option 1 ID : 264330708723
 Option 2 ID : 264330708724
 Option 3 ID : 264330708726
 Option 4 ID : 264330708725
 Status : Answered
 Chosen Option : 1

Q.5 Which option in MS-Word 365 allows you to align the text in a paragraph to both the left and right margins, creating a visually appealing document?

- Ans
- ☐ 1. Line Spacing
 - ☒ 2. Justification
 - ☐ 3. Paragraph Alignment
 - ☐ 4. Text Indentation

Question ID : 264330173334
 Option 1 ID : 264330679817
 Option 2 ID : 264330679818
 Option 3 ID : 264330679816
 Option 4 ID : 264330679815
 Status : Answered
 Chosen Option : 2

Q.6 Which option allows you to select multiple documents while opening them in Microsoft Word 365?

- Ans
- ☐ 1. Hold down the Tab key while clicking on the documents.
 - ☐ 2. Hold down the Windows key while clicking on the documents.
 - ☒ 3. Hold down the Shift key while clicking on the documents.
 - ☐ 4. Hold down the Alt key while clicking on the documents.

Question ID : 264330177673
 Option 1 ID : 264330696809
 Option 2 ID : 264330696810
 Option 3 ID : 264330696807
 Option 4 ID : 264330696808
 Status : Answered
 Chosen Option : 3

Q.7 In Microsoft Word 365, which option is used to save an existing document with a new name or in a different location?

Ans ☒ 1. Save As

☐ 2. Save

☐ 3. Copy

☐ 4. Print

Question ID : 264330180727

Option 1 ID : 264330708876

Option 2 ID : 264330708875

Option 3 ID : 264330708878

Option 4 ID : 264330708877

Status : Answered

Chosen Option : 1

Q.8 Which of the following shortcut keys is used to modify selected text as Italic in MS-Word 365?

Ans ☒ 1. Ctrl + I

☐ 2. Ctrl + U

☐ 3. Ctrl + O

☐ 4. Ctrl + B

Question ID : 264330178268

Option 1 ID : 264330699129

Option 2 ID : 264330699128

Option 3 ID : 264330699130

Option 4 ID : 264330699127

Status : Answered

Chosen Option : 1

Q.9 In MS Excel 365 which file type used in MS Excel produces a comma-delimited text file that can be read by almost all spreadsheet applications on any operating system?

Ans ☒ 1. csv

☐ 2. docx

☐ 3. pdf

☐ 4. xlsx

Question ID : 264330182121

Option 1 ID : 264330714325

Option 2 ID : 264330714323

Option 3 ID : 264330714326

Option 4 ID : 264330714324

Status : Answered

Chosen Option : 4

Q.10 Suppose you have a worksheet in MS Excel 365 containing sales data for different months. You need to update the sales figure for May, as there was an error in the initial entry. What steps should you follow to edit the sales data for the month of May?

- Ans**
- ☒ 1. Click on the cell containing the May sales data -> Press F6 to enter edit mode -> Make the necessary changes -> Press Enter to confirm the edit
 - ☒ 2. Click on the cell containing the May sales data -> Press F2 to enter edit mode -> Make the necessary changes -> Press Enter to confirm the edit
 - ☒ 3. Click on the cell containing the May sales data -> Press F7 to enter edit mode -> Make the necessary changes -> Press Enter to confirm the edit
 - ☒ 4. Click on the cell containing the May sales data -> Press F1 to enter edit mode -> Make the necessary changes -> Press Enter to confirm the edit

Question ID : 264330180828

Option 1 ID : 264330709277

Option 2 ID : 264330709276

Option 3 ID : 264330709278

Option 4 ID : 264330709275

Status : Answered

Chosen Option : 3

