

Constable Executive Male and Female in Delhi Police Examination 2023

| | |
|----------------|--|
| Roll Number | |
| Candidate Name | |
| Venue Name | |
| Exam Date | 16/11/2023 |
| Exam Time | 12:00 PM - 1:30 PM |
| Subject | Constable Executive Male and Female in Delhi Police Examination 2023 |

Section : General Knowledge

Q.1 The sale of car results in _____.

- Ans

☒ 1. decrease in sale of final products

☒ 2. no change

☒ 3. decrease in GDP

☒ 4. increase in GDP

Question ID : 264330116512

Option 1 ID : 264330458136

Option 2 ID : 264330458135

Option 3 ID : 264330458134

Option 4 ID : 264330458133

Status : Answered

Chosen Option : 4

Q.2 As of October 2022, fire altars are primarily found in which of the following Harappan cities?

- Ans

☒ 1. Rakhigarhi

☒ 2. Banawali

☒ 3. Mohenjo-Daro

☒ 4. Kalibangan

Question ID : 264330109643

Option 1 ID : 264330430852

Option 2 ID : 264330430850

Option 3 ID : 264330430851

Option 4 ID : 264330430849

Status : Not Answered

Chosen Option : --

Test Prime

**ALL EXAMS,
ONE SUBSCRIPTION**



70,000+
Mock Tests



**Personalised
Report Card**



**Unlimited
Re-Attempt**



600+
Exam Covered



**Previous Year
Papers**



**500%
Refund**



ATTEMPT FREE MOCK NOW

Q.3 Which of the following will NOT be included in the estimation of national income?

- (i) Expenses on electricity by a factory
- (ii) Financial help to earthquake victims
- (iii) Imputed value of production for self-consumption
- (iv) Brokerage on sale of bonds

- Ans
- ☒ 1. Both (iii) and (iv)
 - ☒ 2. All of (i), (ii), (iii) and (iv)
 - ☒ 3. Both (i) and (ii)
 - ☒ 4. None of (i), (ii), (iii) and (iv)

Question ID : 264330112893

Option 1 ID : 264330443658

Option 2 ID : 264330443659

Option 3 ID : 264330443657

Option 4 ID : 264330443660

Status : Not Answered

Chosen Option : --

Q.4 Which of the following is the hardest mineral?

- Ans
- ☒ 1. Gypsum
 - ☒ 2. Talc
 - ☒ 3. Calcite
 - ☒ 4. Diamond

Question ID : 264330131681

Option 1 ID : 264330515824

Option 2 ID : 264330515823

Option 3 ID : 264330515826

Option 4 ID : 264330515825

Status : Answered

Chosen Option : 4

Q.5 In which year was the city of Agra founded?

- Ans
- ☒ 1. 1404
 - ☒ 2. 1204
 - ☒ 3. 1504
 - ☒ 4. 1304

Question ID : 26433089133

Option 1 ID : 264330350049

Option 2 ID : 264330350052

Option 3 ID : 264330350050

Option 4 ID : 264330350051

Status : Not Answered

Chosen Option : --

Q.6 What is the approximate percentage of adolescents (10-19 years) in India as per Census 2011?

- Ans**
- ☒ 1. 22.6%
 - ☒ 2. 18.3%
 - ☒ 3. 24.3%
 - ☒ 4. 20.9%

Question ID : **264330177908**
 Option 1 ID : **264330697721**
 Option 2 ID : **264330697719**
 Option 3 ID : **264330697722**
 Option 4 ID : **264330697720**
 Status : **Not Answered**
 Chosen Option : --

Q.7 Industrial Licensing is compulsory for five industries. Which of the following is NOT one of those five industries?

- Ans**
- ☒ 1. Cottage Industries
 - ☒ 2. Industrial Explosives
 - ☒ 3. Alcohol
 - ☒ 4. Cigarettes

Question ID : **264330110193**
 Option 1 ID : **264330433052**
 Option 2 ID : **264330433051**
 Option 3 ID : **264330433049**
 Option 4 ID : **264330433050**
 Status : **Answered**
 Chosen Option : 2

Q.8 Kunbi is the folk dance of which Indian state?

- Ans**
- ☒ 1. Jharkhand
 - ☒ 2. Goa
 - ☒ 3. Tamil Nadu
 - ☒ 4. Bihar

Question ID : **264330132394**
 Option 1 ID : **264330518672**
 Option 2 ID : **264330518673**
 Option 3 ID : **264330518671**
 Option 4 ID : **264330518674**
 Status : **Not Answered**
 Chosen Option : --

Q.9 Which of the following is NOT generally used in milk adulteration?

- Ans**
- ☒ 1. Urea
 - ☒ 2. Starch
 - ☒ 3. Saw dust
 - ☒ 4. Detergent

Question ID : **264330111904**
 Option 1 ID : **264330439701**
 Option 2 ID : **264330439703**
 Option 3 ID : **264330439704**
 Option 4 ID : **264330439702**
 Status : **Not Answered**
 Chosen Option : --

Q.10 The maximum duration of a test match of cricket is _____ days.

- Ans ☒ 1. five
☒ 2. two
☒ 3. four
☒ 4. three

Question ID : 264330130648
 Option 1 ID : 264330511706
 Option 2 ID : 264330511703
 Option 3 ID : 264330511705
 Option 4 ID : 264330511704
 Status : Not Answered
 Chosen Option : --

Q.11 Sultan Azlan Shah Cup is held in _____ .

- Ans ☒ 1. Malaysia
☒ 2. Iran
☒ 3. India
☒ 4. Indonesia

Question ID : 264330132557
 Option 1 ID : 264330519323
 Option 2 ID : 264330519326
 Option 3 ID : 264330519324
 Option 4 ID : 264330519325
 Status : Not Answered
 Chosen Option : --

Q.12 King Kanishka was a famous ruler of which Indian dynasty?

- Ans ☒ 1. Hind Unani
☒ 2. Kushan
☒ 3. Satavahana
☒ 4. Shaka

Question ID : 264330119729
 Option 1 ID : 264330469191
 Option 2 ID : 264330469194
 Option 3 ID : 264330469192
 Option 4 ID : 264330469193
 Status : Not Answered
 Chosen Option : --

Q.13 Name the autobiography written by Hillary Clinton, as an account of her eight years as the first lady of the United States.

- Ans ☒ 1. Living History
☒ 2. In the Shadow of Man
☒ 3. My Life, My Truth
☒ 4. Express Yourself

Question ID : 26433055357
 Option 1 ID : 264330216413
 Option 2 ID : 264330216414
 Option 3 ID : 264330216412
 Option 4 ID : 264330216415
 Status : Answered
 Chosen Option : 2

Q.14 Kumaradevi, a Lichchhavi princess, was married to whom among the following Gupta kings?

- Ans ☒ 1. Chandragupta I
☒ 2. Srugupta
☒ 3. Chandragupta II
☒ 4. Samudragupta

Question ID : 264330120281
 Option 1 ID : 264330471375
 Option 2 ID : 264330471376
 Option 3 ID : 264330471377
 Option 4 ID : 264330471378
 Status : Not Answered
 Chosen Option : --

Q.15 Under which Act was the Central Legislature made of two houses?

- Ans ☒ 1. Government of India Act, 1935
☒ 2. Government of India Act, 1919
☒ 3. Government of India Act, 1947
☒ 4. The Indian Councils Act, 1909

Question ID : 264330120294
 Option 1 ID : 264330471428
 Option 2 ID : 264330471427
 Option 3 ID : 264330471429
 Option 4 ID : 264330471430
 Status : Not Answered
 Chosen Option : --

Q.16 Identify the iron and steel plant that was developed in collaboration with Germany.

- Ans ☒ 1. Durgapur
☒ 2. Visvesvaraya
☒ 3. Rourkela
☒ 4. Salem

Question ID : 264330178710
 Option 1 ID : 264330700870
 Option 2 ID : 264330700868
 Option 3 ID : 264330700867
 Option 4 ID : 264330700869
 Status : Not Answered
 Chosen Option : --

Q.17 From which of the following years did the fourth five-year plan commence?

- Ans ☒ 1. 1969
☒ 2. 1964
☒ 3. 1966
☒ 4. 1963

Question ID : 264330118245
 Option 1 ID : 264330464798
 Option 2 ID : 264330464796
 Option 3 ID : 264330464797
 Option 4 ID : 264330464795
 Status : Not Answered
 Chosen Option : --

Q.18 _____ grows well on well-drained fertile soils in the flood plains of India where soils are renewed every year.

- Ans
- ☒ 1. Natural silk
 - ☒ 2. Jute
 - ☒ 3. Saffron
 - ☒ 4. Bajra

Question ID : 264330182947
Option 1 ID : 264330717520
Option 2 ID : 264330717523
Option 3 ID : 264330717521
Option 4 ID : 264330717522
Status : Not Answered
Chosen Option : --

Q.19 Which Committee made recommendations for the inclusion of fundamental duties in the Indian Constitution?

- Ans
- ☒ 1. Sardar Swaran Singh Committee
 - ☒ 2. AP Jain Committee
 - ☒ 3. PK Wattal Committee
 - ☒ 4. John Mathai Committee

Question ID : 264330114484
Option 1 ID : 264330450021
Option 2 ID : 264330450024
Option 3 ID : 264330450022
Option 4 ID : 264330450023
Status : Not Answered
Chosen Option : --

Q.20 Pradhan Mantri Kisan Maan Dhan Yojana is a government scheme meant for old age protection and social security of Small and Marginal Farmers (SMF). It provides for an assured Pension of _____ .

- Ans
- ☒ 1. ₹5,000 month
 - ☒ 2. ₹3,000 month
 - ☒ 3. ₹1,000 month
 - ☒ 4. ₹6,000 month

Question ID : 264330109125
Option 1 ID : 264330428780
Option 2 ID : 264330428778
Option 3 ID : 264330428777
Option 4 ID : 264330428779
Status : Not Answered
Chosen Option : --

Q.21 Who among the following social reformers was the inspiration behind the establishment of Prarthana Samaj in 1867?

- Ans
- ☒ 1. Raja Ram Mohan Roy
 - ☒ 2. Keshab Chandra Sen
 - ☒ 3. Durgaram Mehta
 - ☒ 4. Shiv Narayan Agnihotri

Question ID : 264330120271
Option 1 ID : 264330471342
Option 2 ID : 264330471341
Option 3 ID : 264330471340
Option 4 ID : 264330471339
Status : Not Answered
Chosen Option : --

Q.22 What are the paired organs of balance commonly found in aquatic invertebrates which are usually fluid-filled vesicles with sensory hairs?

- Ans
- ☒ 1. Statocysts
 - ☒ 2. Nephridia
 - ☒ 3. Radula
 - ☒ 4. Pharynx

Question ID : 26433055778
Option 1 ID : 264330218099
Option 2 ID : 264330218098
Option 3 ID : 264330218096
Option 4 ID : 264330218097
Status : Answered
Chosen Option : 2

Q.23 Natpuja dance is the folk dance of _____.

- Ans
- ☒ 1. Bihar
 - ☒ 2. Punjab
 - ☒ 3. Uttar Pradesh
 - ☒ 4. Assam

Question ID : 264330109288
Option 1 ID : 264330429431
Option 2 ID : 264330429429
Option 3 ID : 264330429430
Option 4 ID : 264330429432
Status : Answered
Chosen Option : 4

Q.24 Sulochana Chavan is a celebrated _____ singer who was awarded the Padma award in 2022.

- Ans
- ☒ 1. Carnatic
 - ☒ 2. Lavani
 - ☒ 3. Ghazal
 - ☒ 4. Sufi

Question ID : 264330111949
Option 1 ID : 264330439884
Option 2 ID : 264330439881
Option 3 ID : 264330439883
Option 4 ID : 264330439882
Status : Not Answered
Chosen Option : --

Q.25 _____ is the first Indian woman to have won a Grammy.

- Ans ☒ 1. Tanvi Shah
☒ 2. Neeti Mohan
☒ 3. Neha Bhasin
☒ 4. Monali Thakur

Question ID : 264330113233
 Option 1 ID : 264330445017
 Option 2 ID : 264330445020
 Option 3 ID : 264330445018
 Option 4 ID : 264330445019
 Status : Answered
 Chosen Option : 4

Q.26 The Chairman and members of the State Public Service Commission are appointed by the _____.

- Ans ☒ 1. Governor
☒ 2. President of India
☒ 3. State Assembly
☒ 4. Chief Minister

Question ID : 264330120169
 Option 1 ID : 264330470933
 Option 2 ID : 264330470934
 Option 3 ID : 264330470932
 Option 4 ID : 264330470931
 Status : Answered
 Chosen Option : 3

Q.27 'To Kill a Mockingbird', an English novel, was written by which of the following authors?

- Ans ☒ 1. Doris Lessing
☒ 2. Harper Lee
☒ 3. Muriel Spark
☒ 4. Joseph Heller

Question ID : 26433055378
 Option 1 ID : 264330216499
 Option 2 ID : 264330216497
 Option 3 ID : 264330216496
 Option 4 ID : 264330216498
 Status : Not Answered
 Chosen Option : --

Q.28 Who among the following established the Ramakrishna Mission in 1897?

- Ans ☒ 1. Swami Dayananda Saraswati
☒ 2. Swami Shraddhananda
☒ 3. Swami Vivekananda
☒ 4. Swami Acchutananda

Question ID : 264330114118
 Option 1 ID : 264330448557
 Option 2 ID : 264330448560
 Option 3 ID : 264330448559
 Option 4 ID : 264330448558
 Status : Not Answered
 Chosen Option : --

Q.29 'Lent' is a religious observance celebrated by the people who practice the _____ religion.

- Ans
- ☒ 1. Buddhist
 - ☒ 2. Jain
 - ☒ 3. Sikh
 - ☒ 4. Christian

Question ID : 264330113183
 Option 1 ID : 264330444817
 Option 2 ID : 264330444818
 Option 3 ID : 264330444820
 Option 4 ID : 264330444819
 Status : Not Answered
 Chosen Option : --

Q.30 What does the E stand for in SEZ?

- Ans
- ☒ 1. Economically
 - ☒ 2. External
 - ☒ 3. Economic
 - ☒ 4. Export

Question ID : 264330109406
 Option 1 ID : 264330429902
 Option 2 ID : 264330429903
 Option 3 ID : 264330429901
 Option 4 ID : 264330429904
 Status : Answered
 Chosen Option : 3

Q.31 r-selected species have maximum:

- Ans
- ☒ 1. reproductive rate
 - ☒ 2. mortality rate
 - ☒ 3. survival rate
 - ☒ 4. parental care

Question ID : 264330120959
 Option 1 ID : 264330474052
 Option 2 ID : 264330474053
 Option 3 ID : 264330474054
 Option 4 ID : 264330474051
 Status : Answered
 Chosen Option : 1

Q.32 Rahul decided to take a walk through a forest early in the morning. While he was inside the dense forest, he could see the beautiful sunrays through the small gaps within trees and clearly see the path taken by those rays. Of which effect was this a result?

- Ans
- ☒ 1. Reflection
 - ☒ 2. Diffraction
 - ☒ 3. Dispersion
 - ☒ 4. Tyndall effect

Question ID : 264330177004

Option 1 ID : 264330694211

Option 2 ID : 264330694212

Option 3 ID : 264330694214

Option 4 ID : 264330694213

Status : Answered

Chosen Option : 3

Q.33 'Food, Work and Productivity' were the focus of which Five-Year Plan?

- Ans
- ☒ 1. Ninth Five-Year Plan
 - ☒ 2. Fifth Five-Year Plan
 - ☒ 3. Seventh Five-Year Plan
 - ☒ 4. Fourth Five-Year Plan

Question ID : 264330112475

Option 1 ID : 264330441988

Option 2 ID : 264330441986

Option 3 ID : 264330441987

Option 4 ID : 264330441985

Status : Answered

Chosen Option : 4

Q.34 The Afghan noble Khan Jahan Lodi rebelled against the Mughal emperor _____ and was defeated.

- Ans
- ☒ 1. Bahadur Shah
 - ☒ 2. Shah Jahan
 - ☒ 3. Aurangzeb
 - ☒ 4. Muhammad Azam Shah

Question ID : 264330182274

Option 1 ID : 264330714921

Option 2 ID : 264330714922

Option 3 ID : 264330714919

Option 4 ID : 264330714920

Status : Not Answered

Chosen Option : --

Q.35 According to the census of India 2011, which group of states has the highest sex ratio?

- Ans ☒ 1. Kerala and Tamil Nadu
☒ 2. Kerala and Andhra Pradesh
☒ 3. Andhra Pradesh and Chhattisgarh
☒ 4. Tamil Nadu and Bihar

Question ID : 264330167031
 Option 1 ID : 264330655127
 Option 2 ID : 264330655129
 Option 3 ID : 264330655130
 Option 4 ID : 264330655128
 Status : Answered
 Chosen Option : 1

Q.36 Which of the following Fundamental Duties is mentioned first in the Constitution of India?

- Ans ☒ 1. To uphold and protect the sovereignty, unity and integrity of India
☒ 2. To cherish and follow the noble ideals which inspired our national struggle for freedom
☒ 3. To defend the country and render national service when called upon to do so
☒ 4. To abide by the Constitution and respect its ideals and institutions, the National Flag and the National Anthem

Question ID : 264330130439
 Option 1 ID : 264330510869
 Option 2 ID : 264330510868
 Option 3 ID : 264330510867
 Option 4 ID : 264330510870
 Status : Answered
 Chosen Option : 1

Q.37 Which of the following denotes the ideals that the state should keep in mind while formulating policies and enacting laws?

- Ans ☒ 1. Directive Principles Of State Policy
☒ 2. Preamble
☒ 3. Fundamental Right
☒ 4. Fundamental Duties

Question ID : 264330173502
 Option 1 ID : 264330680489
 Option 2 ID : 264330680490
 Option 3 ID : 264330680487
 Option 4 ID : 264330680488
 Status : Answered
 Chosen Option : 3

Q.38 Dr. Shyama Prasad Mukherjee Swimming Pool Complex is located at:

- Ans ☒ 1. Bangalore
☒ 2. Kolkata
☒ 3. New Delhi
☒ 4. Patiala

Question ID : 264330118439
 Option 1 ID : 264330465158
 Option 2 ID : 264330465160
 Option 3 ID : 264330465157
 Option 4 ID : 264330465159
 Status : Not Answered
 Chosen Option : --

Q.39 Arrange the following Fundamental Duties in sequential order according to their mention in the Constitution of India.

- A. To abide by the Constitution and respect its ideals and institutions.
 B. To uphold and protect the sovereignty, unity and integrity of India.
 C. To cherish and follow the noble ideals which inspired our national struggle for freedom.
 D. To safeguard public property and to abjure violence.

- Ans ☒ 1. B, A, D, C
☒ 2. A, D, C, B
☒ 3. A, C, B, D
☒ 4. A, B, C, D

Question ID : 264330114752
 Option 1 ID : 264330451096
 Option 2 ID : 264330451094
 Option 3 ID : 264330451095
 Option 4 ID : 264330451093
 Status : Answered
 Chosen Option : 1

Q.40 Summer Olympics 1948, when Indian hockey team won gold medal was held in which of the following cities?

- Ans ☒ 1. Tokyo
☒ 2. Los Angeles
☒ 3. Rome
☒ 4. London

Question ID : 264330176747
 Option 1 ID : 264330693206
 Option 2 ID : 264330693204
 Option 3 ID : 264330693205
 Option 4 ID : 264330693203
 Status : Answered
 Chosen Option : 1

Q.41 Champaner-Pavagadh Archaeological Park is situated in which of the following states of India?

- Ans**
- ☐ 1. Bihar
 - ☐ 2. Rajasthan
 - ☐ 3. Haryana
 - ☒ 4. Gujarat

Question ID : 264330111848
 Option 1 ID : 264330439477
 Option 2 ID : 264330439479
 Option 3 ID : 264330439480
 Option 4 ID : 264330439478
 Status : Answered
 Chosen Option : 1

Q.42 In which year was Project Tiger launched in India to conserve the declining number of tigers?

- Ans**
- ☐ 1. 1987
 - ☒ 2. 1973
 - ☐ 3. 1981
 - ☐ 4. 1970

Question ID : 264330179025
 Option 1 ID : 264330702105
 Option 2 ID : 264330702106
 Option 3 ID : 264330702104
 Option 4 ID : 264330702103
 Status : Not Answered
 Chosen Option : --

Q.43 Public Distribution System was relaunched by Government of India as _____ in 1997.

- Ans**
- ☒ 1. Targeted Public Distribution System
 - ☐ 2. Targeted People Distribution System
 - ☐ 3. Cooperative Public Distribution System
 - ☐ 4. Public Food Distribution System

Question ID : 264330130671
 Option 1 ID : 264330511797
 Option 2 ID : 264330511796
 Option 3 ID : 264330511795
 Option 4 ID : 264330511798
 Status : Answered
 Chosen Option : 3

Q.44 Who is the first law officer of the Government of India?

- Ans**
- ☐ 1. Law Commissioner
 - ☐ 2. Law Minister
 - ☐ 3. The Advocate-General for the State
 - ☒ 4. Attorney General of India

Question ID : 264330110590
 Option 1 ID : 264330434639
 Option 2 ID : 264330434640
 Option 3 ID : 264330434638
 Option 4 ID : 264330434637
 Status : Answered
 Chosen Option : 2

Q.45 What are sea salt, pollen, ash, smoke soot and fine soil associated with?

- Ans ☒ 1. Gases
☒ 2. Dust particles
☒ 3. Water vapour
☒ 4. Meteors

Question ID : 264330137311
 Option 1 ID : 264330537871
 Option 2 ID : 264330537873
 Option 3 ID : 264330537874
 Option 4 ID : 264330537872
 Status : Answered
 Chosen Option : 2

Q.46 Sangeet Natak Akademi award winner Guru Bipin Singh is a famous _____ dancer.

- Ans ☒ 1. Manipuri
☒ 2. Mohiniattam
☒ 3. Odissi
☒ 4. Sattriya

Question ID : 264330111968
 Option 1 ID : 264330439958
 Option 2 ID : 264330439957
 Option 3 ID : 264330439959
 Option 4 ID : 264330439960
 Status : Not Answered
 Chosen Option : --

Q.47 The _____ Tableau won 'People's Choice Award' at the 74th Republic Day Parade.

- Ans ☒ 1. Tripura
☒ 2. Uttarakhand
☒ 3. Gujarat
☒ 4. Kerala

Question ID : 264330134252
 Option 1 ID : 264330526006
 Option 2 ID : 264330526004
 Option 3 ID : 264330526003
 Option 4 ID : 264330526005
 Status : Not Answered
 Chosen Option : --

Q.48 Sitara Devi and Lachhu Maharaj are popular for their mastery in which of the following styles of Indian dance?

- Ans ☒ 1. Manipuri
☒ 2. Kuchipudi
☒ 3. Bharatanatyam
☒ 4. Kathak

Question ID : 264330130513
 Option 1 ID : 264330511164
 Option 2 ID : 264330511163
 Option 3 ID : 264330511166
 Option 4 ID : 264330511165
 Status : Not Answered
 Chosen Option : --

Q.49 Who is the head of the government among the following?

- Ans
- ☐ 1. President
 - ☐ 2. Speaker
 - ☐ 3. Vice President
 - ☒ 4. Prime Minister

Question ID : 264330173516
 Option 1 ID : 264330680543
 Option 2 ID : 264330680546
 Option 3 ID : 264330680545
 Option 4 ID : 264330680544
 Status : Answered
 Chosen Option : 1

Q.50 Who among the following was the founder of Satyashodhak Samaj, a society dedicated towards eradicating caste injustice?

- Ans
- ☐ 1. Bal Gangadhar Tilak
 - ☐ 2. Periyar Erode Venkata Ramasamy
 - ☒ 3. Jyotirao Govindrao Phule
 - ☐ 4. Mahatma Ayyankali

Question ID : 264330119005
 Option 1 ID : 264330466677
 Option 2 ID : 264330466678
 Option 3 ID : 264330466675
 Option 4 ID : 264330466676
 Status : Not Answered
 Chosen Option : --

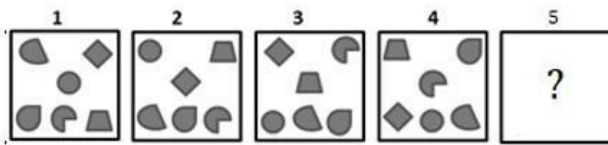
Section : Reasoning

Q.1 Select the correct combination of mathematical signs that can sequentially replace the * signs and balance the given equation.
 $66 * 3 * 11 * 12 * 230$

- Ans
- ☐ 1. $\times, -, =, +$
 - ☐ 2. $-, \times, +, =$
 - ☒ 3. $\div, \times, -, =$
 - ☐ 4. $\times, -, \div, =$

Question ID : 26433079091
 Option 1 ID : 264330310370
 Option 2 ID : 264330310371
 Option 3 ID : 264330310369
 Option 4 ID : 264330310368
 Status : Not Answered
 Chosen Option : --

Q.2 Each of the following questions consists of 4 figures marked 1, 2, 3 and 4 called the Problem Figures followed by 4 other figures. Select a figure from amongst the Answer Figures which will continue the same series as established by the four Problem Figures.



Ans

✗ 1.



✗ 2.



✗ 3.



✓ 4.



Question ID : 264330110540

Option 1 ID : 264330434440

Option 2 ID : 264330434437

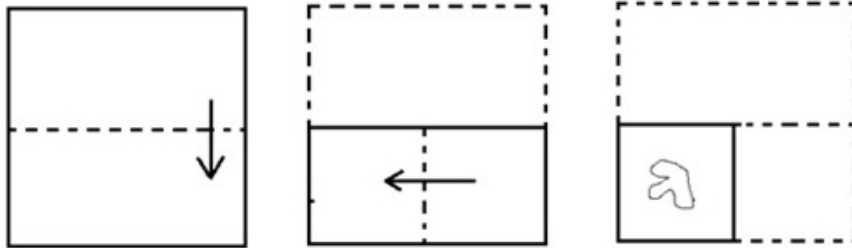
Option 3 ID : 264330434439

Option 4 ID : 264330434438

Status : Not Answered

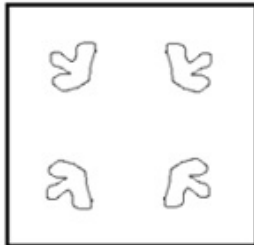
Chosen Option : --

Q.3 The sequence of folding a piece of paper and the manner in which the folded paper has been cut is shown below. Choose a figure which would most closely resemble the unfolded form of the paper.

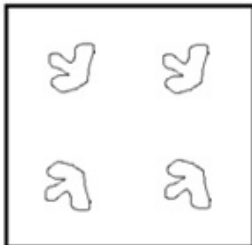


Ans

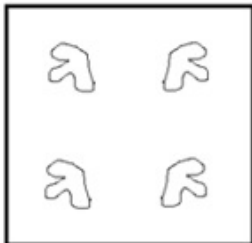
✓ 1.



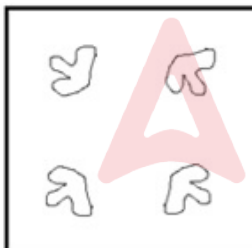
✗ 2.



✗ 3.



✗ 4.



Question ID : 264330112317

Option 1 ID : 264330441353

Option 2 ID : 264330441355

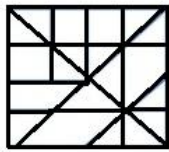
Option 3 ID : 264330441354

Option 4 ID : 264330441356

Status : Not Answered

Chosen Option : --

Q.4 Select the option figure that is embedded in the given figure (rotation is NOT allowed).



Ans


✗ 1.



✗ 2.



✓ 3.



✗ 4.



Question ID : 26433091722

Option 1 ID : 264330360254

Option 2 ID : 264330360253

Option 3 ID : 264330360256

Option 4 ID : 264330360255

Status : Not Answered

Chosen Option : --

Q.5 Which figure should replace the question mark (?) if the series were to be continued?

| | | | | | | | | |
|---|---|---|---|---|---|---|---|---|
| M | 3 | E | A | L | S | I | M | |
| E | I | M | 3 | I | E | L | S | |
| A | V | I | L | M | 3 | E | 6 | ? |

Ans

✗ 1.

| | |
|---|---|
| 6 | M |
| E | I |
| L | S |

✓ 2.

| | |
|---|---|
| 6 | 2 |
| E | I |
| L | S |

✗ 3.

| | |
|---|---|
| 6 | 2 |
| E | S |
| L | I |

✗ 4.

| | |
|---|---|
| S | 2 |
| E | 6 |
| L | I |

Question ID : 264330130817

Option 1 ID : 264330512380

Option 2 ID : 264330512382

Option 3 ID : 264330512381

Option 4 ID : 264330512379

Status : Not Answered

Chosen Option : --

Q.6 Six letters, M, N, O, P, Q and R are written on different faces of a dice. Three positions of this dice are shown here. Find the letter on the face opposite N.



Ans ✓ 1. M

✗ 2. P

✗ 3. R

✗ 4. O

Question ID : 264330106403

Option 1 ID : 264330417913

Option 2 ID : 264330417915

Option 3 ID : 264330417916

Option 4 ID : 264330417914

Status : Not Answered

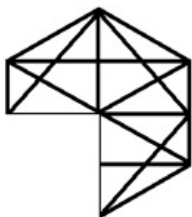
Chosen Option : --

Q.7 In a code language, if SMILE is coded as RLHKD and BELIEVE is coded as ADKHDUD, then how will LAUGHTER be coded?

- Ans
- ☒ 1. NCWIJVG
 - ☒ 2. MBVHIUFS
 - ☒ 3. MBHVIFSU
 - ☒ 4. KZTFGSDQ

Question ID : 26433089486
Option 1 ID : 264330351446
Option 2 ID : 264330351448
Option 3 ID : 264330351445
Option 4 ID : 264330351447
Status : Not Answered
Chosen Option : --

Q.8 Select a figure from amongst the four given options which, when placed in the blank space of figure (X), would complete the pattern.



X

Ans

- ☒ 1.
- ☒ 2.
- ☒ 3.
- ☒ 4.

Question ID : 264330102212
Option 1 ID : 264330401314
Option 2 ID : 264330401313
Option 3 ID : 264330401315
Option 4 ID : 264330401316
Status : Not Answered
Chosen Option : --

Q.9 Two statements are given followed by two conclusions numbered I and II. Assuming the statements to be true, even if they seem to be at variance with commonly known facts, decide which of the conclusions logically follow(s) from the statements.

Statements:

All insects are birds.

Some birds are fishes.

Conclusions:

I. All fishes are insects.

II. Some fishes are insects.

- Ans ☒ 1. Only conclusion II follows
- ☒ 2. Neither conclusion I nor II follows
- ☒ 3. Both conclusions I and II follow
- ☒ 4. Only conclusion I follows

Question ID : 26433045340

Option 1 ID : 264330177796

Option 2 ID : 264330177798

Option 3 ID : 264330177797

Option 4 ID : 264330177795

Status : Not Answered

Chosen Option : --

Q.10 Which two signs should be interchanged to make the given equation correct?

$$23 \times 7 - 76 + 87 \div 344 = 2$$

- Ans ☒ 1. \times and \div
- ☒ 2. \div and $=$
- ☒ 3. \times and $-$
- ☒ 4. $+$ and \times

Question ID : 26433085734

Option 1 ID : 264330336640

Option 2 ID : 264330336637

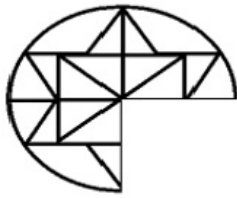
Option 3 ID : 264330336639

Option 4 ID : 264330336638

Status : Not Answered

Chosen Option : --

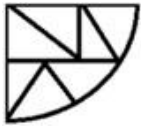
Q.11 Select a figure from amongst the four given options which, when placed in the blank space of figure (X), would complete the pattern.



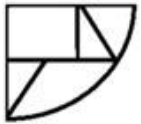
X

Ans

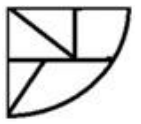
✗ 1.



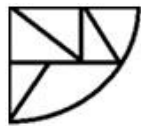
✗ 2.



✗ 3.



✓ 4.



Question ID : 264330102218

Option 1 ID : 264330401340

Option 2 ID : 264330401339

Option 3 ID : 264330401338

Option 4 ID : 264330401337

Status : Answered

Chosen Option : 4

Q.12 Select the option that is related to the fifth letter cluster in the same way as the second letter cluster is related to the first letter cluster and the fourth letter cluster is related to the third letter cluster.

EGAK : WKSO :: JRCU : BVUY :: CLAG : ?

Ans

✗ 1. USPC

✗ 2. IHAL

✓ 3. UPSK

✗ 4. IHEN

Question ID : 26433074689

Option 1 ID : 264330292846

Option 2 ID : 264330292844

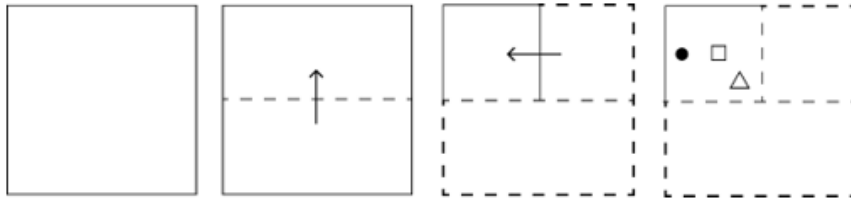
Option 3 ID : 264330292847

Option 4 ID : 264330292845

Status : Not Answered

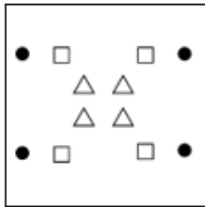
Chosen Option : --

Q.13 A square sheet of paper is folded along the dotted line successively along the directions shown and is then punched in the last. How would the paper look when unfolded?

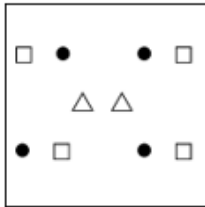


Ans

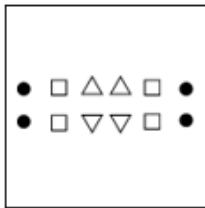
✗ 1.



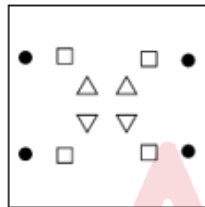
✗ 2.



✗ 3.



✓ 4.



Question ID : 264330172426

Option 1 ID : 264330676258

Option 2 ID : 264330676257

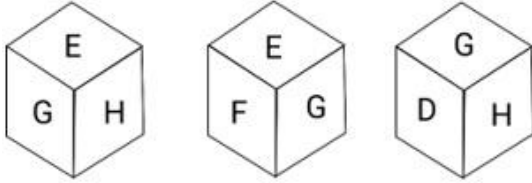
Option 3 ID : 264330676255

Option 4 ID : 264330676256

Status : Not Answered

Chosen Option : --

Q.14 Six letters, D, E, F, G, H and I are written on different faces of a dice. Three positions of this dice are shown here. Find the letter on the face opposite E.



- Ans
- ☒ 1. F
 - ☒ 2. D
 - ☒ 3. G
 - ☒ 4. I

Question ID : 264330106406

Option 1 ID : 264330417926

Option 2 ID : 264330417925

Option 3 ID : 264330417927

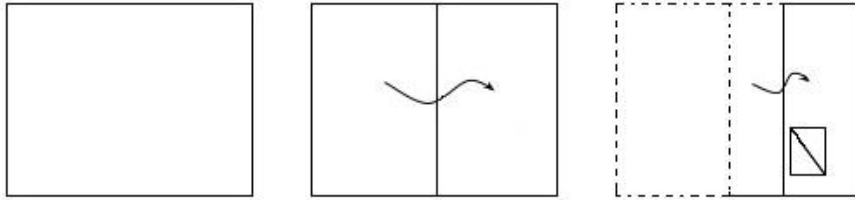
Option 4 ID : 264330417928

Status : Answered

Chosen Option : 2

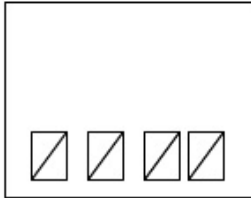


Q.15 A paper is folded and cut as shown below. How will it appear when unfolded?

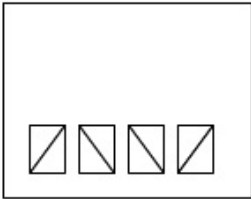


Ans

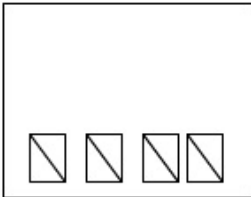
✗ 1.



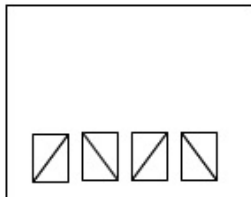
✗ 2.



✗ 3.



✓ 4.



Question ID : 264330118719

Option 1 ID : 264330466127

Option 2 ID : 264330466128

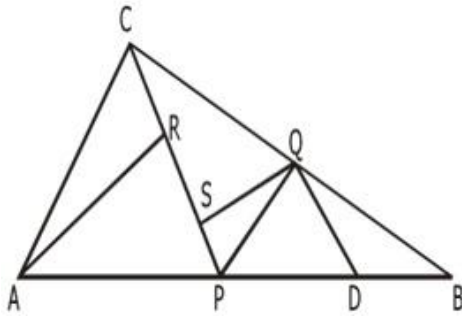
Option 3 ID : 264330466129

Option 4 ID : 264330466130

Status : Not Answered

Chosen Option : --

Q.16 How many triangles are there in the given figure?



- Ans
- ☒ 1. 13
 - ☒ 2. 11
 - ☒ 3. 10
 - ☒ 4. 12

Question ID : 26433080666

Option 1 ID : 264330316597

Option 2 ID : 264330316599

Option 3 ID : 264330316600

Option 4 ID : 264330316598

Status : Answered

Chosen Option : 2

Q.17 Muskan, Amrita, Pranjali, Deepti, Riya and Sonali are six friends sitting around a circle facing the centre. Muskan is between Amrita and Pranjali. Amrita is opposite to Deepti. Riya is not the immediate neighbour of Amrita. Who is opposite to Sonali?

- Ans
- ☒ 1. Deepti
 - ☒ 2. Riya
 - ☒ 3. Muskan
 - ☒ 4. Pranjali

Question ID : 26433086249

Option 1 ID : 264330338689

Option 2 ID : 264330338691

Option 3 ID : 264330338692

Option 4 ID : 264330338690

Status : Answered

Chosen Option : 4

Q.18 Select the option that is related to the fourth term in the same way as the first term is related to the second term and the fifth term is related to the sixth term.
144 : 12 :: ? : 25 :: 216 : 18

- Ans
- ☒ 1. 280
 - ☒ 2. 260
 - ☒ 3. 300
 - ☒ 4. 250

Question ID : 264330102261

Option 1 ID : 264330401512

Option 2 ID : 264330401511

Option 3 ID : 264330401509

Option 4 ID : 264330401510

Status : Answered

Chosen Option : 3

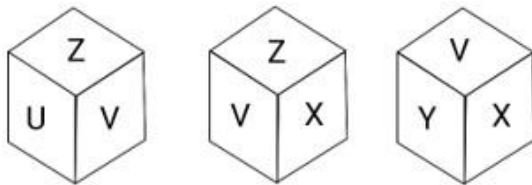
Q.19 Select the option that represents the letters that, when sequentially placed from left to right in the blanks below, will complete the letter series.

A Q _ _ S A _ W E _ A _ _ E S _ Q W _ S

- Ans ☒ 1. WESQWAWWE
☒ 2. WEQSQAWE
☒ 3. WEQSQAWE
☒ 4. WSQSQAWE

Question ID : 26433092536
Option 1 ID : 264330363433
Option 2 ID : 264330363436
Option 3 ID : 264330363435
Option 4 ID : 264330363434
Status : Not Answered
Chosen Option : --

Q.20 Six letters, U, V, W, X, Y and Z are written on different faces of a dice. Three positions of this dice are shown here. Find the letter on the face opposite X.



- Ans ☒ 1. Z
☒ 2. V
☒ 3. U
☒ 4. W

Question ID : 264330106414
Option 1 ID : 264330417960
Option 2 ID : 264330417958
Option 3 ID : 264330417957
Option 4 ID : 264330417959
Status : Not Answered
Chosen Option : --

Q.21 Select the set in which the numbers are related in the same way as are the numbers of the given sets.

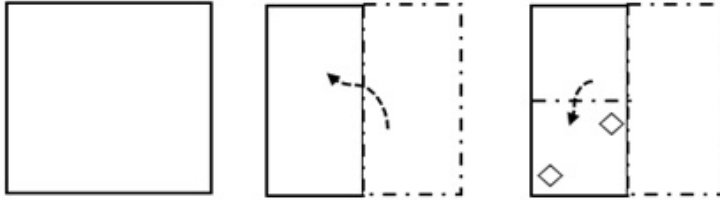
(NOTE: Operations should be performed on the whole numbers, without breaking down the numbers into its constituent digits. E.g., 13 – Operations on 13 such as adding/ deleting/ multiplying etc. to 13 can be performed. Breaking down 13 into 1 and 3 and then performing mathematical operations on 1 and 3 is not allowed.)

(205, 146, 87)
(333, 274, 215)

- Ans ☒ 1. (222, 169, 123)
☒ 2. (230, 181, 137)
☒ 3. (188, 129, 70)
☒ 4. (180, 130, 71)

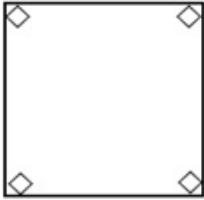
Question ID : 264330178753
Option 1 ID : 264330701041
Option 2 ID : 264330701040
Option 3 ID : 264330701042
Option 4 ID : 264330701039
Status : Answered
Chosen Option : 3

Q.22 A paper is folded and cut as shown below. How will it appear when unfolded?

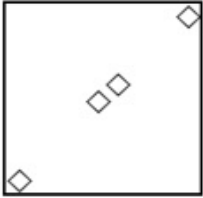


Ans

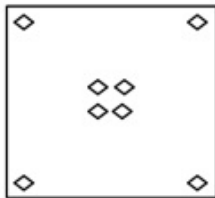
✗ 1.



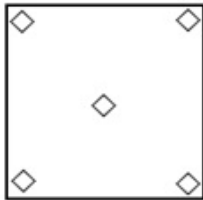
✗ 2.



✓ 3.



✗ 4.



Question ID : 264330117301

Option 1 ID : 264330461261

Option 2 ID : 264330461263

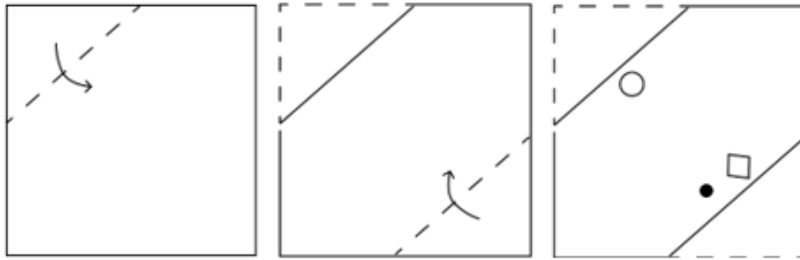
Option 3 ID : 264330461264

Option 4 ID : 264330461262

Status : Not Answered

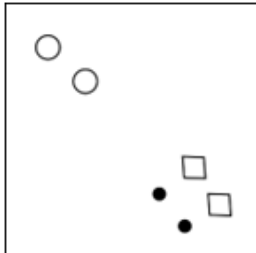
Chosen Option : --

Q.23 A square sheet of paper is folded along the dotted line successively along the directions shown and is then punched in the last. How would the paper look when unfolded?

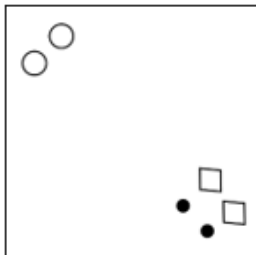


Ans

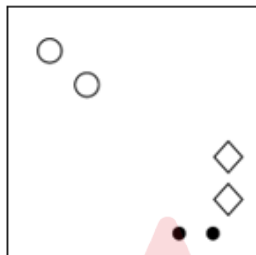
✓ 1.



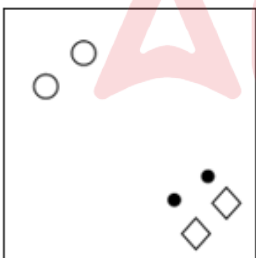
✗ 2.



✗ 3.



✗ 4.



Question ID : 264330172408

Option 1 ID : 264330676185

Option 2 ID : 264330676184

Option 3 ID : 264330676183

Option 4 ID : 264330676186

Status : Answered

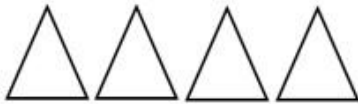
Chosen Option : 1

Q.24 Select the figure that will replace the question mark (?) in the following figure series.



Ans

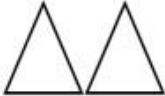
✗ 1.



✗ 2.



✗ 3.



✓ 4.



Question ID : 264330112027

Option 1 ID : 264330440195

Option 2 ID : 264330440196

Option 3 ID : 264330440193

Option 4 ID : 264330440194

Status : Answered

Chosen Option : 4

Q.25 Select the number from among the given options that can replace the question mark (?) in the following series.

2, 15, 41, 93, 197, ?

Ans ✗ 1. 324

✓ 2. 405

✗ 3. 320

✗ 4. 534

Question ID : 264330109770

Option 1 ID : 264330431358

Option 2 ID : 264330431357

Option 3 ID : 264330431359

Option 4 ID : 264330431360

Status : Not Answered

Chosen Option : --

Section : Numerical Ability

Q.1 The concentration of three wines A, B, and C is given as 15%, 30%, and 45%, respectively. They are mixed in the ratio of p : 5 : 3, resulting in a 30% concentration solution. What is the value of p?

Ans ✗ 1. 2

✓ 2. 3

✗ 3. 1

✗ 4. 4

Question ID : 264330178923

Option 1 ID : 264330701696

Option 2 ID : 264330701697

Option 3 ID : 264330701695

Option 4 ID : 264330701698

Status : Not Answered

Chosen Option : --

Q.2 The radius of a sphere is 1.8 cm. Find the exact volume (in cm^3) of this sphere.

- Ans ☒ 1. 7.776π
☒ 2. 7.676π
☒ 3. 7.786π
☒ 4. 7.766π

Question ID : 264330112558
 Option 1 ID : 264330442317
 Option 2 ID : 264330442318
 Option 3 ID : 264330442320
 Option 4 ID : 264330442319
 Status : Not Answered
 Chosen Option : --

Q.3 Evaluate $\frac{(4.7)^2 - (1.3)^2}{4.7 - 1.3}$.

- Ans ☒ 1. 5
☒ 2. 3
☒ 3. 4
☒ 4. 6

Question ID : 264330111436
 Option 1 ID : 264330437831
 Option 2 ID : 264330437832
 Option 3 ID : 264330437830
 Option 4 ID : 264330437829
 Status : Not Answered
 Chosen Option : --

Q.4 Simplify the following.
 $(8888 \div 88) \div 5$

- Ans ☒ 1. $22\frac{1}{5}$
☒ 2. $25\frac{1}{4}$
☒ 3. $20\frac{1}{5}$
☒ 4. $15\frac{1}{5}$

Question ID : 264330119324
 Option 1 ID : 264330467585
 Option 2 ID : 264330467586
 Option 3 ID : 264330467584
 Option 4 ID : 264330467583
 Status : Not Answered
 Chosen Option : --

Q.5 There are 4 horses grazing at each corner of a square field of side 63 m. They are roped in such a way that they can touch the middle of each side. Find the remaining area of the ground where they do not graze. (Use $\pi = \frac{22}{7}$)

- Ans**
- ☒ 1. 780.50 m²
 - ☒ 2. 750.50 m²
 - ☒ 3. 850.50 m²
 - ☒ 4. 800.50 m²

Question ID : 26433091570
 Option 1 ID : 264330359646
 Option 2 ID : 264330359645
 Option 3 ID : 264330359648
 Option 4 ID : 264330359647
 Status : Not Answered
 Chosen Option : --

Q.6 Find the HCF of 3.6, 0.54 and 1.08.

- Ans**
- ☒ 1. 1.8
 - ☒ 2. 0.018
 - ☒ 3. 0.18
 - ☒ 4. 18

Question ID : 264330104224
 Option 1 ID : 264330409198
 Option 2 ID : 264330409200
 Option 3 ID : 264330409199
 Option 4 ID : 264330409197
 Status : Not Answered
 Chosen Option : --

Q.7 A man borrows ₹2,196 and agrees to return it with compound interest at the rate of 25% in three equal annual instalments at the end of the first, second and the third year. The amount of instalment (in ₹) is:

- Ans**
- ☒ 1. 1,125
 - ☒ 2. 984
 - ☒ 3. 1,072
 - ☒ 4. 732

Question ID : 264330103557
 Option 1 ID : 264330406533
 Option 2 ID : 264330406536
 Option 3 ID : 264330406535
 Option 4 ID : 264330406534
 Status : Not Answered
 Chosen Option : --

Q.8 If $A : B : C = 2 : 3 : 5$, then the ratio $\frac{A}{B} : \frac{B}{C} : \frac{C}{A}$ is equal to:

- Ans ☒ 1. 20 : 18 : 75
☒ 2. 75 : 20 : 29
☒ 3. 18 : 20 : 79
☒ 4. 20 : 25 : 39

Question ID : 264330106077

Option 1 ID : 264330416609

Option 2 ID : 264330416612

Option 3 ID : 264330416611

Option 4 ID : 264330416610

Status : Not Answered

Chosen Option : --

Q.9 Find the time taken by a train 750 m long to cross a platform twice its length at a speed of 81 km/h.

- Ans ☒ 1. 80 sec
☒ 2. 90 sec
☒ 3. 100 sec
☒ 4. 75 sec

Question ID : 264330183829

Option 1 ID : 264330720992

Option 2 ID : 264330720993

Option 3 ID : 264330720994

Option 4 ID : 264330720995

Status : Not Answered

Chosen Option : --

Q.10 A number y, when reduced by 25%, becomes 120% of a second number z. What percentage of z is y?

- Ans ☒ 1. 160%
☒ 2. 145%
☒ 3. 175%
☒ 4. 150%

Question ID : 264330131132

Option 1 ID : 264330513641

Option 2 ID : 264330513640

Option 3 ID : 264330513642

Option 4 ID : 264330513639

Status : Not Answered

Chosen Option : --

Q.11 A sum was invested at a certain rate of simple interest per annum for 2 years. Had it been invested at 3% per annum more rate than the existing rate, the simple interest accrued in the 2 years would have been ₹240 more. The sum invested was:

- Ans ☒ 1. ₹16,000
☒ 2. ₹4,000
☒ 3. ₹24,000
☒ 4. ₹6,000

Question ID : 264330122721
 Option 1 ID : 264330480982
 Option 2 ID : 264330480979
 Option 3 ID : 264330480980
 Option 4 ID : 264330480981
 Status : Not Answered
 Chosen Option : --

Q.12 Deepak sold a bike to Sharath at a profit of 40%. Sharath sold his bike to Sivaji at a loss of 30%. If Deepak paid ₹8,000 for this bike, then find the cost price of the bike for Sivaji.

- Ans ☒ 1. ₹6,728
☒ 2. ₹7,840
☒ 3. ₹5,423
☒ 4. ₹11,200

Question ID : 264330104351
 Option 1 ID : 264330409706
 Option 2 ID : 264330409707
 Option 3 ID : 264330409705
 Option 4 ID : 264330409708
 Status : Not Answered
 Chosen Option : --

Q.13 The marked price of a book is ₹767. A shopkeeper allows a discount of 20% and still earns a profit of 30%. Find the cost price of the book (in ₹).

- Ans ☒ 1. 680
☒ 2. 450
☒ 3. 472
☒ 4. 525

Question ID : 264330126516
 Option 1 ID : 264330495736
 Option 2 ID : 264330495738
 Option 3 ID : 264330495739
 Option 4 ID : 264330495737
 Status : Not Answered
 Chosen Option : --

Q.14 P aims to get total 360 marks out of 500. He gets 5% less than his target. How much does he get?

- Ans ☒ 1. 335
☒ 2. 325
☒ 3. 340
☒ 4. 330

Question ID : 264330126100
 Option 1 ID : 264330494074
 Option 2 ID : 264330494072
 Option 3 ID : 264330494075
 Option 4 ID : 264330494073
 Status : Not Answered
 Chosen Option : --

Q.15 If A and B together can complete a work in 15 days, B and C together in 12 days and C and A together in 10 days, then in how many days can B alone complete the work?

- Ans ☒ 1. 30
☒ 2. 45
☒ 3. 35
☒ 4. 40

Question ID : 264330104327
 Option 1 ID : 264330409609
 Option 2 ID : 264330409612
 Option 3 ID : 264330409610
 Option 4 ID : 264330409611
 Status : Not Answered
 Chosen Option : --

Section : Computer Proficiency

Q.1 In MS Excel 365, which of the following is the correct sequence for deleting a column in MS-Excel spreadsheet?

- Ans ☒ 1. Select the cell<<Right click<<Delete<<Entire Row
☒ 2. Select the cell<<Left click<<Delete<<Entire Row
☒ 3. Select the cell<<Right click<<Delete<<Entire Column
☒ 4. Select the cell<<Left click<<Delete<<Entire Column

Question ID : 264330176696
 Option 1 ID : 264330693000
 Option 2 ID : 264330693002
 Option 3 ID : 264330692999
 Option 4 ID : 264330693001
 Status : Answered
 Chosen Option : 3

Q.2 Which of the following is a shortcut key for Save as option in MS Word 365?

- Ans
- ☐ 1. F1
 - ☐ 2. F11
 - ☒ 3. F12
 - ☐ 4. F2

Question ID : 264330180434
 Option 1 ID : 264330707703
 Option 2 ID : 264330707704
 Option 3 ID : 264330707705
 Option 4 ID : 264330707706
 Status : Answered
 Chosen Option : 1

Q.3 What is the purpose of the 'Font Color' option in Microsoft Word 365?

- Ans
- ☐ 1. Changing the font style
 - ☐ 2. Changing the font size
 - ☐ 3. Applying a background colour to text
 - ☒ 4. Changing the colour of the text

Question ID : 264330180712
 Option 1 ID : 264330708815
 Option 2 ID : 264330708816
 Option 3 ID : 264330708817
 Option 4 ID : 264330708818
 Status : Answered
 Chosen Option : 4

Q.4 Which menu tab on Microsoft Word's 365 ribbon contains options for text formatting and editing?

- Ans
- ☐ 1. File
 - ☒ 2. Home
 - ☐ 3. View
 - ☐ 4. Insert

Question ID : 264330180733
 Option 1 ID : 264330708899
 Option 2 ID : 264330708900
 Option 3 ID : 264330708901
 Option 4 ID : 264330708902
 Status : Answered
 Chosen Option : 4

Q.5 In MS Excel 365, which of the following is NOT a method to open a spreadsheet in MS-Excel?

- Ans
- ☒ 1. Shift + Ctrl + N
 - ☐ 2. Alt + F + O
 - ☐ 3. Ctrl + N
 - ☐ 4. File -> open

Question ID : 264330178255
 Option 1 ID : 264330699078
 Option 2 ID : 264330699076
 Option 3 ID : 264330699077
 Option 4 ID : 264330699075
 Status : Answered
 Chosen Option : 1

Q.6 Which of the following is a common element in an MS Word 365 document's header or footer?

- Ans
- ☐ 1. Document title
 - ☐ 2. Bullet points
 - ☒ 3. Page number
 - ☐ 4. Font colour

Question ID : 264330180861
 Option 1 ID : 264330709408
 Option 2 ID : 264330709409
 Option 3 ID : 264330709407
 Option 4 ID : 264330709410
 Status : Answered
 Chosen Option : 3

Q.7 What information is typically required to sign in to an email client?

- Ans
- ☐ 1. Full name and date of birth
 - ☒ 2. Email address and password
 - ☐ 3. Social media account details
 - ☐ 4. Phone number and address

Question ID : 264330173551
 Option 1 ID : 264330680684
 Option 2 ID : 264330680683
 Option 3 ID : 264330680686
 Option 4 ID : 264330680685
 Status : Answered
 Chosen Option : 2

Q.8 In MS Excel 365 which of the following statements related to deleting rows in an excel sheet is correct?

- Ans
- ☐ 1. If you want to delete multiple rows at once, simply select the rows by clicking and dragging over the row numbers, and then press 'Ctrl' and 'space'.
 - ☒ 2. If you want to delete multiple rows at once, simply select the rows by clicking and dragging over the row numbers, and then press 'Ctrl' and '-'.
 - ☐ 3. If you want to delete multiple rows at once, simply select the rows by clicking and dragging over the row numbers, and then press 'Ctrl' and '+'.
 - ☐ 4. If you want to delete multiple rows at once, simply select the rows by clicking and dragging over the row numbers, and then press 'Ctrl' and 'Enter'.

Question ID : 264330180417
 Option 1 ID : 264330707637
 Option 2 ID : 264330707636
 Option 3 ID : 264330707635
 Option 4 ID : 264330707638
 Status : Answered
 Chosen Option : 1

Q.9 Which of the following shortcut keys is used to copy formatting in MS Word 365?

- Ans**
- ☐ 1. Ctrl + Shift + A
 - ☐ 2. Ctrl + Shift + D
 - ☒ 3. Ctrl + Shift + C
 - ☐ 4. Ctrl + Shift + V

Question ID : 264330180432

Option 1 ID : 264330707697

Option 2 ID : 264330707698

Option 3 ID : 264330707695

Option 4 ID : 264330707696

Status : Answered

Chosen Option : 3

Q.10 Which of the following services allows users to buy and sell products online?

- Ans**
- ☐ 1. Instant messaging
 - ☒ 2. E-commerce
 - ☐ 3. Video conferencing
 - ☐ 4. Streaming

Question ID : 264330180807

Option 1 ID : 264330709193

Option 2 ID : 264330709192

Option 3 ID : 264330709194

Option 4 ID : 264330709191

Status : Answered

Chosen Option : 2

