

Constable Executive Male and Female in Delhi Police Examination 2023

Roll Number	
Candidate Name	
Venue Name	
Exam Date	15/11/2023
Exam Time	12:00 PM - 1:30 PM
Subject	Constable Executive Male and Female in Delhi Police Examination 2023

Section : General Knowledge

Q.1 Which of the following State Governments organises Surajkund Mela every year?

- Ans

✖ 1. Jammu

✔ 2. Haryana

✖ 3. Punjab

✖ 4. Jharkhand

Question ID : 264330106206

Option 1 ID : 264330417126

Option 2 ID : 264330417127

Option 3 ID : 264330417125

Option 4 ID : 264330417128

Status : Answered

Chosen Option : 2

Q.2 The Wazir (minister) of _____ built Moth ki Masjid in Delhi.

- Ans

✖ 1. Alauddin Khalji

✖ 2. Khizr Khan

✔ 3. Sikandar Lodi

✖ 4. Firuz Shah Tughluq

Question ID : 264330114076

Option 1 ID : 264330448391

Option 2 ID : 264330448389

Option 3 ID : 264330448390

Option 4 ID : 264330448392

Status : Answered

Chosen Option : 4

Q.3 Which is the most common tidal pattern?

- Ans

✖ 1. Mixed tides

✖ 2. Diurnal tides

✖ 3. Spring tides

✔ 4. Semi-diurnal tides

Question ID : 264330116383

Option 1 ID : 264330457619

Option 2 ID : 264330457617

Option 3 ID : 264330457620

Option 4 ID : 264330457618

Status : Answered

Chosen Option : 3

Test Prime

**ALL EXAMS,
ONE SUBSCRIPTION**



70,000+
Mock Tests



**Personalised
Report Card**



**Unlimited
Re-Attempt**



600+
Exam Covered



**Previous Year
Papers**



**500%
Refund**



ATTEMPT FREE MOCK NOW

Q.4 Which of the following dance forms belongs to the Vaishnava Monasteries of North East India?

- Ans
- ☒ 1. Odissi
 - ☒ 2. Mohiniattam
 - ☒ 3. Kuchipudi
 - ☒ 4. Sattriya

Question ID : 264330106181
 Option 1 ID : 264330417028
 Option 2 ID : 264330417027
 Option 3 ID : 264330417025
 Option 4 ID : 264330417026
 Status : Answered
 Chosen Option : 1

Q.5 How many tiers of government are mentioned in the Constitution of India?

- Ans
- ☒ 1. Two
 - ☒ 2. Four
 - ☒ 3. Three
 - ☒ 4. Five

Question ID : 264330133039
 Option 1 ID : 264330521209
 Option 2 ID : 264330521207
 Option 3 ID : 264330521208
 Option 4 ID : 264330521210
 Status : Answered
 Chosen Option : 1

Q.6 When did the Paris Agreement on Climate Change come into force (become effective from)?

- Ans
- ☒ 1. 22nd April 2016
 - ☒ 2. 4th November 2016
 - ☒ 3. 27th January 2017
 - ☒ 4. 12th December 2015

Question ID : 264330137310
 Option 1 ID : 264330537868
 Option 2 ID : 264330537869
 Option 3 ID : 264330537870
 Option 4 ID : 264330537867
 Status : Not Answered
 Chosen Option : --

Q.7 Who among the following is associated with the Mridangam instrument?

- Ans
- ☒ 1. Zarin S Sharma
 - ☒ 2. Hari Prasad Chaurasia
 - ☒ 3. Palghat Mani Iyer
 - ☒ 4. Ali Akbar Khan

Question ID : 264330111947
 Option 1 ID : 264330439873
 Option 2 ID : 264330439875
 Option 3 ID : 264330439876
 Option 4 ID : 264330439874
 Status : Answered
 Chosen Option : 4

Q.8 According to Census 2011, which group of states have the highest males literacy rates?

- Ans**
- ☒ 1. Rajasthan and Bihar
 - ☒ 2. Kerala and Tamil Nadu
 - ☒ 3. Kerala and Mizoram
 - ☒ 4. Sikkim and Nagaland

Question ID : 264330119912
 Option 1 ID : 264330469923
 Option 2 ID : 264330469926
 Option 3 ID : 264330469925
 Option 4 ID : 264330469924
 Status : Answered
 Chosen Option : 3

Q.9 According to Census 2011, what was the population density of India?

- Ans**
- ☒ 1. 382 persons
 - ☒ 2. 343 persons
 - ☒ 3. 372 persons
 - ☒ 4. 362 persons

Question ID : 264330138074
 Option 1 ID : 264330540903
 Option 2 ID : 264330540906
 Option 3 ID : 264330540904
 Option 4 ID : 264330540905
 Status : Answered
 Chosen Option : 1

Q.10 Which of the following statements is correct?

- a) The Indian desert lies towards the eastern margins of the Aravali Hills. It is an undulating sandy plain covered with sand dunes.
- b) This region has arid climate with low vegetation cover and streams appear during the rainy season.

- Ans**
- ☒ 1. Only a is correct.
 - ☒ 2. Both a and b are correct.
 - ☒ 3. Only b is correct.
 - ☒ 4. Both a and b are incorrect.

Question ID : 264330178101
 Option 1 ID : 264330698467
 Option 2 ID : 264330698469
 Option 3 ID : 264330698468
 Option 4 ID : 264330698470
 Status : Answered
 Chosen Option : 2

Q.11 Who among the following was the first person in British India to get the scholarship of Indian Society of Oriental Arts, established in 1906?

- Ans**
- ☒ 1. Jagdish Chandra Bose
 - ☒ 2. Subrahmanyam Chandrasekhar
 - ☒ 3. Nandalal Bose
 - ☒ 4. Prafulla Chandra Roy

Question ID : 264330120264
 Option 1 ID : 264330471313
 Option 2 ID : 264330471311
 Option 3 ID : 264330471312
 Option 4 ID : 264330471314
 Status : Answered
 Chosen Option : 4

Q.12 Which state has two headquarters of Indian Railway Zones?

- Ans**
- ☒ 1. Rajasthan
 - ☒ 2. Uttar Pradesh
 - ☒ 3. Bihar
 - ☒ 4. Assam

Question ID : 264330182904
 Option 1 ID : 264330717360
 Option 2 ID : 264330717361
 Option 3 ID : 264330717362
 Option 4 ID : 264330717363
 Status : Answered
 Chosen Option : 2

Q.13 Untouchability is against which of the following fundamental rights?

- Ans**
- ☒ 1. Right to freedom of religion
 - ☒ 2. Right to constitutional remedy
 - ☒ 3. Right to liberty
 - ☒ 4. Right to equality

Question ID : 264330109838
 Option 1 ID : 264330431631
 Option 2 ID : 264330431632
 Option 3 ID : 264330431630
 Option 4 ID : 264330431629
 Status : Answered
 Chosen Option : 4

Q.14 Elections under which act gave the control of seven provinces in 1937 to the Congress?

- Ans**
- ☒ 1. Government of India Act, 1935
 - ☒ 2. Government of India Act, 1937
 - ☒ 3. Provincial Act, 1935
 - ☒ 4. Municipalities Act, 1935

Question ID : 264330120148
 Option 1 ID : 264330470847
 Option 2 ID : 264330470850
 Option 3 ID : 264330470849
 Option 4 ID : 264330470848
 Status : Answered
 Chosen Option : 3

Q.15 Turmeric powder is adulterated with:

- Ans ☒ 1. lead chromate
☒ 2. zinc carbonate
☒ 3. silicon oxide
☒ 4. magnesium chloride

Question ID : 264330120973
 Option 1 ID : 264330474109
 Option 2 ID : 264330474108
 Option 3 ID : 264330474107
 Option 4 ID : 264330474110
 Status : Answered
 Chosen Option : 4

Q.16 In which king's honour and praise was the Prayag Prashasti written by the Sanskrit poet Harisena?

- Ans ☒ 1. Vikramaditya
☒ 2. Chandragupta
☒ 3. Samudragupta
☒ 4. Ashoka

Question ID : 264330118958
 Option 1 ID : 264330466490
 Option 2 ID : 264330466487
 Option 3 ID : 264330466489
 Option 4 ID : 264330466488
 Status : Answered
 Chosen Option : 3

Q.17 When was the Bengal Partition Plan implemented?

- Ans ☒ 1. 10 September 1910
☒ 2. 16 October 1905
☒ 3. 7 August 1899
☒ 4. 15 August 1915

Question ID : 264330114043
 Option 1 ID : 264330448259
 Option 2 ID : 264330448258
 Option 3 ID : 264330448257
 Option 4 ID : 264330448260
 Status : Answered
 Chosen Option : 2

Q.18 Gram Nyayalaya Act was enacted in the year _____.

- Ans ☒ 1. 2006
☒ 2. 2008
☒ 3. 2000
☒ 4. 2004

Question ID : 264330120179
 Option 1 ID : 264330470973
 Option 2 ID : 264330470974
 Option 3 ID : 264330470971
 Option 4 ID : 264330470972
 Status : Not Answered
 Chosen Option : --

Q.19 Who became the first Indian woman to win two Olympic medals?

- Ans
- ☒ 1. Karnam Malleswari
 - ☒ 2. PV Sindhu
 - ☒ 3. Saina Nehwal
 - ☒ 4. Mary Kom

Question ID : 264330119262
 Option 1 ID : 264330467338
 Option 2 ID : 264330467336
 Option 3 ID : 264330467335
 Option 4 ID : 264330467337
 Status : Answered
 Chosen Option : 2

Q.20 The three-second rule is applicable for the game of _____.

- Ans
- ☒ 1. kho-kho
 - ☒ 2. badminton
 - ☒ 3. basketball
 - ☒ 4. kabaddi

Question ID : 264330110390
 Option 1 ID : 264330433838
 Option 2 ID : 264330433840
 Option 3 ID : 264330433839
 Option 4 ID : 264330433837
 Status : Answered
 Chosen Option : 1

Q.21 Which of the following is a merit of the parliamentary system?

- Ans
- ☒ 1. Autocracy
 - ☒ 2. Narrow representation
 - ☒ 3. Non responsible government
 - ☒ 4. Harmony between legislature and executive

Question ID : 264330177768
 Option 1 ID : 264330697182
 Option 2 ID : 264330697181
 Option 3 ID : 264330697179
 Option 4 ID : 264330697180
 Status : Answered
 Chosen Option : 4

Q.22 'Godaan', a famous novel, was authored by _____.

- Ans
- ☒ 1. Jaishankar Prasad
 - ☒ 2. Harivansh Rai Bachchan
 - ☒ 3. Suryakant Tripathi Nirala
 - ☒ 4. Munshi Premchand

Question ID : 26433064230
 Option 1 ID : 264330251512
 Option 2 ID : 264330251515
 Option 3 ID : 264330251514
 Option 4 ID : 264330251513
 Status : Answered
 Chosen Option : 4

Q.23 Expenditure incurred by residents during their foreign tour will be added to which component while calculating national income?

- Ans
- ☒ 1. Government final consumption expenditure
 - ☒ 2. Private final consumption expenditure
 - ☒ 3. Gross foreign capital formation
 - ☒ 4. Gross domestic capital formation

Question ID : 264330116514
 Option 1 ID : 264330458141
 Option 2 ID : 264330458143
 Option 3 ID : 264330458144
 Option 4 ID : 264330458142
 Status : Answered
 Chosen Option : 2

Q.24 FIH Asia Cup Men's Hockey 2022 was hosted by:

- Ans
- ☒ 1. Japan
 - ☒ 2. Pakistan
 - ☒ 3. Indonesia
 - ☒ 4. India

Question ID : 264330118896
 Option 1 ID : 264330466242
 Option 2 ID : 264330466241
 Option 3 ID : 264330466240
 Option 4 ID : 264330466239
 Status : Answered
 Chosen Option : 4

Q.25 Who was India's 12th Prime Minister?

- Ans
- ☒ 1. Inder Kumar Gujral
 - ☒ 2. Atal Bihari Vajpayee
 - ☒ 3. PV Narasimha Rao
 - ☒ 4. Manmohan Singh

Question ID : 264330110817
 Option 1 ID : 264330435545
 Option 2 ID : 264330435546
 Option 3 ID : 264330435547
 Option 4 ID : 264330435548
 Status : Answered
 Chosen Option : 1

Q.26 Name the Indian social reformer who played a crucial role in the passing of the Age of Consent Bill, 1891.

- Ans
- ☒ 1. Rabindranath Tagore
 - ☒ 2. C Subramania Bharathi
 - ☒ 3. Behramji Malabari
 - ☒ 4. Ishwarchandra Vidyasagar

Question ID : 264330114115
 Option 1 ID : 264330448546
 Option 2 ID : 264330448548
 Option 3 ID : 264330448547
 Option 4 ID : 264330448545
 Status : Not Answered
 Chosen Option : --

Q.27 'Why I am an Atheist' is an autobiography of whom among the following Revolutionaries?

- Ans
- ☒ 1. Chandrashekhar Azad
 - ☒ 2. Suryakant Sen
 - ☒ 3. Ramprasad Bismil
 - ☒ 4. Bhagat Singh

Question ID : 26433064212
Option 1 ID : 264330251440
Option 2 ID : 264330251441
Option 3 ID : 264330251443
Option 4 ID : 264330251442
Status : Answered
Chosen Option : 4

Q.28 Who among the following was the captain of the Indian cricket team in the 1983 World Cup?

- Ans
- ☒ 1. Kapil Dev
 - ☒ 2. Mohinder Amarnath
 - ☒ 3. Dilip Vengsarkar
 - ☒ 4. Sunil Gavaskar

Question ID : 264330176921
Option 1 ID : 264330693880
Option 2 ID : 264330693882
Option 3 ID : 264330693879
Option 4 ID : 264330693881
Status : Answered
Chosen Option : 1

Q.29 Identify the artist who is NOT related to the musical instrument pakhwaj.

- Ans
- ☒ 1. Pandit Kishan Maharaj
 - ☒ 2. Ayodhya Prasad
 - ☒ 3. Gopal Das
 - ☒ 4. Totaram Sharma

Question ID : 264330111193
Option 1 ID : 264330436860
Option 2 ID : 264330436858
Option 3 ID : 264330436859
Option 4 ID : 264330436857
Status : Answered
Chosen Option : 1

Q.30 Which of the following temples is located in Uttarakhand?

- Ans
- ☒ 1. Neelkanth Mahadev
 - ☒ 2. Ranakpur
 - ☒ 3. Gomateshwara
 - ☒ 4. Kamakhya

Question ID : 264330111850
Option 1 ID : 264330439486
Option 2 ID : 264330439487
Option 3 ID : 264330439488
Option 4 ID : 264330439485
Status : Answered
Chosen Option : 1

Q.31 Sonal Mansingh is an eminent Indian classical dancer and a leading exponent of Bharatanatyam, Kuchipudi, Odissi and _____ .

- Ans**
- ☒ 1. Sattriya
 - ☒ 2. Kathakali
 - ☒ 3. Chhau
 - ☒ 4. Kathak

Question ID : 264330106198
Option 1 ID : 264330417096
Option 2 ID : 264330417095
Option 3 ID : 264330417094
Option 4 ID : 264330417093
Status : Answered
Chosen Option : 2

Q.32 By which name was the Head of the Panchayat or the Village Headman called in Mughal India?

- Ans**
- ☒ 1. Samant
 - ☒ 2. Mahant
 - ☒ 3. Muqaddam
 - ☒ 4. Khoran

Question ID : 264330118989
Option 1 ID : 264330466613
Option 2 ID : 264330466614
Option 3 ID : 264330466612
Option 4 ID : 264330466611
Status : Answered
Chosen Option : 1

Q.33 Sodium hydrogen carbonate is called:

- Ans**
- ☒ 1. Washing soda
 - ☒ 2. Baking soda
 - ☒ 3. Gypsum
 - ☒ 4. Plaster of Paris

Question ID : 264330177337
Option 1 ID : 264330695539
Option 2 ID : 264330695540
Option 3 ID : 264330695542
Option 4 ID : 264330695541
Status : Answered
Chosen Option : 1

Q.34 According to the Ministry of Commerce and Industry 2021-22, which of the following is the largest exported agricultural product from India?

- Ans**
- ☒ 1. Rice
 - ☒ 2. Maize
 - ☒ 3. Spices
 - ☒ 4. Wheat

Question ID : 264330138066
Option 1 ID : 264330540873
Option 2 ID : 264330540871
Option 3 ID : 264330540874
Option 4 ID : 264330540872
Status : Answered
Chosen Option : 1

Q.35 Milk is good source of:

- Ans
- ☐ 1. phosphorous, iron, and protein
 - ☐ 2. calcium, magnesium, and fibre
 - ☐ 3. calcium, iron, and fibre
 - ☒ 4. calcium, phosphorous, and protein

Question ID : 264330120970
 Option 1 ID : 264330474097
 Option 2 ID : 264330474098
 Option 3 ID : 264330474096
 Option 4 ID : 264330474095
 Status : Answered
 Chosen Option : 3

Q.36 Which of the following Ministries introduced the Venture Capital Assistance Scheme?

- Ans
- ☐ 1. Ministry of Science and Technology
 - ☐ 2. Ministry of Micro, Small and Medium Enterprises
 - ☒ 3. Ministry of Agriculture and Farmers Welfare
 - ☐ 4. Ministry of Finance

Question ID : 264330116547
 Option 1 ID : 264330458275
 Option 2 ID : 264330458276
 Option 3 ID : 264330458273
 Option 4 ID : 264330458274
 Status : Not Answered
 Chosen Option : --

Q.37 Which form of art is celebrated at the Mando festival of Goa?

- Ans
- ☐ 1. Painting
 - ☐ 2. Literature
 - ☐ 3. Sports
 - ☒ 4. Music

Question ID : 264330132421
 Option 1 ID : 264330518781
 Option 2 ID : 264330518782
 Option 3 ID : 264330518780
 Option 4 ID : 264330518779
 Status : Answered
 Chosen Option : 4

Q.38 Economic reform measures in India were formally introduced in _____.

- Ans
- ☐ 1. 1990
 - ☒ 2. 1991
 - ☐ 3. 1980
 - ☐ 4. 1947

Question ID : 264330110021
 Option 1 ID : 264330432364
 Option 2 ID : 264330432361
 Option 3 ID : 264330432363
 Option 4 ID : 264330432362
 Status : Answered
 Chosen Option : 2

Q.39 Which of the following statements is correct about India for the period between 1950 and 1990?

- Ans** ☒ 1. The proportion of GDP contributed by agriculture and population engaged in the sector declined significantly.
- ☒ 2. The proportion of GDP contributed by agriculture declined significantly but not the population engaged in the sector.
- ☒ 3. Being an agricultural economy, the contribution of agricultural sector is not considerable for Indian economy
- ☒ 4. The proportion of GDP contributed by agriculture increased significantly but not the population engaged in the sector.

Question ID : 264330120896

Option 1 ID : 264330473801

Option 2 ID : 264330473800

Option 3 ID : 264330473802

Option 4 ID : 264330473799

Status : Answered

Chosen Option : 2

Q.40 Which of the following Constitutional Amendment Acts added Fundamental Duties in the Indian Constitution?

- Ans** ☒ 1. 65th
- ☒ 2. 74th
- ☒ 3. 73rd
- ☒ 4. 42nd

Question ID : 264330173482

Option 1 ID : 264330680408

Option 2 ID : 264330680410

Option 3 ID : 264330680409

Option 4 ID : 264330680407

Status : Answered

Chosen Option : 4

Q.41 According to the Census of India 2011, which group of states recorded the lowest male literacy rate?

- Ans** ☒ 1. Bihar and Arunachal Pradesh
- ☒ 2. Rajasthan and Arunachal Pradesh
- ☒ 3. Bihar and Rajasthan
- ☒ 4. Arunachal Pradesh and Odisha

Question ID : 264330179512

Option 1 ID : 264330704050

Option 2 ID : 264330704048

Option 3 ID : 264330704047

Option 4 ID : 264330704049

Status : Answered

Chosen Option : 3

Q.42 The first chairman of the Planning Commission in India was _____.

- Ans
- ☒ 1. Jaiprakash Narayan
 - ☒ 2. Sriman Narayan
 - ☒ 3. Jawaharlal Nehru
 - ☒ 4. Radha Mohan Singh

Question ID : 264330109991
 Option 1 ID : 264330432243
 Option 2 ID : 264330432242
 Option 3 ID : 264330432241
 Option 4 ID : 264330432244
 Status : Answered
 Chosen Option : 3

Q.43 The Ghode Modni dance, to celebrate the victory of warriors, is performed in which of the following states of India?

- Ans
- ☒ 1. Goa
 - ☒ 2. West Bengal
 - ☒ 3. Karnataka
 - ☒ 4. Tamil Nadu

Question ID : 264330110427
 Option 1 ID : 264330433986
 Option 2 ID : 264330433988
 Option 3 ID : 264330433985
 Option 4 ID : 264330433987
 Status : Not Answered
 Chosen Option : --

Q.44 The Charminar was constructed by which of the following dynasties?

- Ans
- ☒ 1. Pandya
 - ☒ 2. Chera
 - ☒ 3. Chalukya
 - ☒ 4. Qutb Shahi

Question ID : 264330111851
 Option 1 ID : 264330439491
 Option 2 ID : 264330439490
 Option 3 ID : 264330439492
 Option 4 ID : 264330439489
 Status : Answered
 Chosen Option : 4

Q.45 Net investment can be best expressed using which of the following elements?

- Ans
- ☒ 1. Net investment-Depreciation
 - ☒ 2. Depletion Value
 - ☒ 3. Replacement Cost
 - ☒ 4. Gross Investment-Depreciation

Question ID : 264330130661
 Option 1 ID : 264330511756
 Option 2 ID : 264330511758
 Option 3 ID : 264330511757
 Option 4 ID : 264330511755
 Status : Answered
 Chosen Option : 4

Q.46 What is the chemical formula of sodium nitrate?

- Ans
- ☒ 1. NaNH_3
 - ☒ 2. NaNO_4
 - ☒ 3. NaNO_3
 - ☒ 4. NaNO_2

Question ID : 264330173646
 Option 1 ID : 264330681063
 Option 2 ID : 264330681066
 Option 3 ID : 264330681065
 Option 4 ID : 264330681064
 Status : Answered
 Chosen Option : 3

Q.47 Geeta Mahalik won the Sangeet Natak Akademi Award for which form of dance?

- Ans
- ☒ 1. Odissi
 - ☒ 2. Kathakali
 - ☒ 3. Bharatanatyam
 - ☒ 4. Kuchipudi

Question ID : 26433074883
 Option 1 ID : 264330293623
 Option 2 ID : 264330293622
 Option 3 ID : 264330293621
 Option 4 ID : 264330293620
 Status : Not Answered
 Chosen Option : --

Q.48 'Mahatma Gandhi National Fellowship' ('MGNF') is a two-year academic programme that was launched by _____ in 2020 as part of the SANKALP programme.

- Ans
- ☒ 1. IIT Madras
 - ☒ 2. IIM Ahmedabad
 - ☒ 3. IIT Delhi
 - ☒ 4. IIM Bangalore

Question ID : 264330111593
 Option 1 ID : 264330438459
 Option 2 ID : 264330438458
 Option 3 ID : 264330438460
 Option 4 ID : 264330438457
 Status : Not Answered
 Chosen Option : --

Q.49 Who among the following was one of the court poets of the King Samudragupta?

- Ans
- ☒ 1. Harisena
 - ☒ 2. Surdas
 - ☒ 3. Pragyajan
 - ☒ 4. Hariharan

Question ID : 264330118957
 Option 1 ID : 264330466485
 Option 2 ID : 264330466483
 Option 3 ID : 264330466486
 Option 4 ID : 264330466484
 Status : Answered
 Chosen Option : 1

Q.50 Which of the following Articles provides the minorities the right to establish and administer educational institutions of their choice?

Ans ☒ 1. Article 31

☒ 2. Article 30

☒ 3. Article 29

☒ 4. Article 28

Question ID : 264330120099

Option 1 ID : 264330470654

Option 2 ID : 264330470653

Option 3 ID : 264330470652

Option 4 ID : 264330470651

Status : Answered

Chosen Option : 4

Section : Reasoning

Q.1 Two statements are given followed by two conclusions numbered I and II. Assuming the statements to be true, even if they seem to be at variance with commonly known facts, decide which of the conclusions logically follow(s) from the statements.

Statements:

All hens are dogs.

All dogs are peacocks.

Conclusions:

I. All hens are peacocks.

II. All peacocks are dogs.

Ans ☒ 1. Only conclusion II follows

☒ 2. Only conclusion I follows

☒ 3. Neither conclusion I nor II follows

☒ 4. Both conclusions I and II follow

Question ID : 26433045342

Option 1 ID : 264330177804

Option 2 ID : 264330177803

Option 3 ID : 264330177806

Option 4 ID : 264330177805

Status : Answered

Chosen Option : 2

Q.2 In a code language, if PETROL is coded as ODSQNK and ENGINE is coded as DMFHMD, then how will VEHICLE be coded?

Ans ☒ 1. UDGHBKD

☒ 2. UDHGKBD

☒ 3. WFIJDMF

☒ 4. WDIHDKF

Question ID : 26433089488

Option 1 ID : 264330351454

Option 2 ID : 264330351456

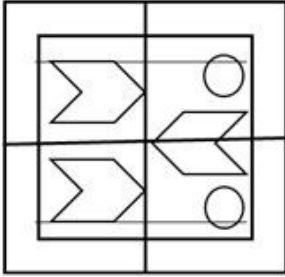
Option 3 ID : 264330351453

Option 4 ID : 264330351455

Status : Answered

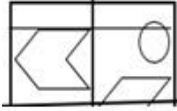
Chosen Option : 1

Q.3 Select the option figure which is embedded in the given figure as its part (rotation is NOT allowed).

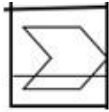


Ans

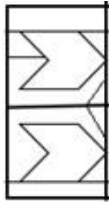
✗ 1.



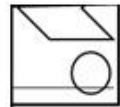
✗ 2.



✗ 3.



✓ 4.



Question ID : 264330116994

Option 1 ID : 264330460060

Option 2 ID : 264330460057

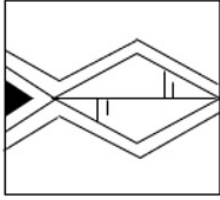
Option 3 ID : 264330460058

Option 4 ID : 264330460059

Status : Answered

Chosen Option : 4

Q.4 Select the option figure which is embedded in the given figure. (Rotation is NOT allowed).

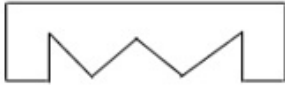


Ans

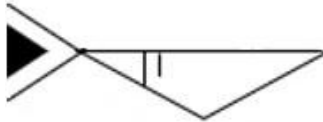
✗ 1.



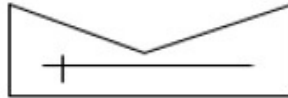
✗ 2.



✓ 3.



✗ 4.



Question ID : 26433085532

Option 1 ID : 264330335832

Option 2 ID : 264330335830

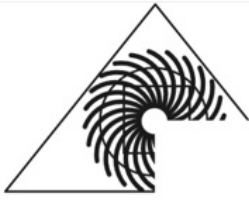
Option 3 ID : 264330335829

Option 4 ID : 264330335831

Status : Answered

Chosen Option : 3

Q.5 Which of the following option figures will complete the pattern in the figure given below?



Ans

✗ 1.



✓ 2.



✗ 3.



✗ 4.



Question ID : 26433080625

Option 1 ID : 264330316436

Option 2 ID : 264330316434

Option 3 ID : 264330316433

Option 4 ID : 264330316435

Status : Answered

Chosen Option : 2

Q.6 Which figure should replace the question mark (?) if the series were to be continued?

6	□	2	6	□	☆	8	□	
L		8		6		P		?
2	☆	☆	□	8	2	2	☆	

Ans

✗ 1.

2	8
3	
☆	□

✗ 2.

☆	2
8	
□	P

✓ 3.

☆	2
□	
P	8

✗ 4.

☆	2
P	
□	8

Question ID : 264330130792

Option 1 ID : 264330512280

Option 2 ID : 264330512279

Option 3 ID : 264330512282

Option 4 ID : 264330512281

Status : Not Answered

Chosen Option : --

Q.7 Which two signs should be interchanged to make the given equation correct?

$$98 - 49 \div 7 + 74 \times 55 = 3$$

Ans ✗ 1. = and +

✗ 2. = and ÷

✓ 3. = and ×

✗ 4. = and -

Question ID : 26433085739

Option 1 ID : 264330336659

Option 2 ID : 264330336657

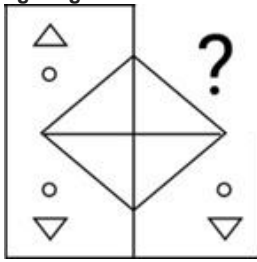
Option 3 ID : 264330336658

Option 4 ID : 264330336660

Status : Answered

Chosen Option : 3

Q.8 Select the figure from the given options that will replace the question mark (?) in the figure given below and complete the pattern.



Ans

✓ 1.



✗ 2.



✗ 3.



✗ 4.



Question ID : 264330111706

Option 1 ID : 264330438909

Option 2 ID : 264330438910

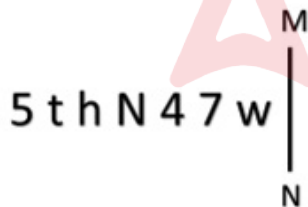
Option 3 ID : 264330438912

Option 4 ID : 264330438911

Status : Answered

Chosen Option : 1

Q.9 Select the correct mirror image of the given combination when the mirror is placed at MN as shown below.



Ans

✗ 1.

2 t h N 7 4 W

✗ 2.

w 7 t N 4 t 2

✗ 3.

w 7 N 4 t t 2

✓ 4.

w 7 4 N t t 2

Question ID : 264330117004

Option 1 ID : 264330460099

Option 2 ID : 264330460097

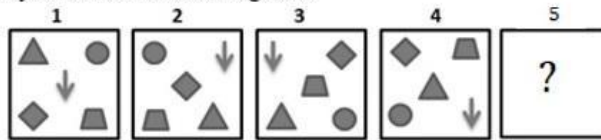
Option 3 ID : 264330460098

Option 4 ID : 264330460100

Status : Answered


Chosen Option : 4

Q.10 Each of the following questions consists of 4 figures marked 1, 2, 3 and 4 called the Problem Figures followed by 4 other figures. Select a figure from amongst the Answer Figures which will continue the same series as established by the four Problem Figures.



Ans

✗ 1.



✓ 2.



✗ 3.



✗ 4.



Question ID : 264330110536

Option 1 ID : 264330434421

Option 2 ID : 264330434424

Option 3 ID : 264330434423

Option 4 ID : 264330434422

Status : Answered

Chosen Option : 2

Q.11 Which of the following option figures will complete the pattern in the figure given below?



Ans

✗ 1.



✗ 2.



✗ 3.



✓ 4.



Question ID : 26433089619

Option 1 ID : 264330351978

Option 2 ID : 264330351977

Option 3 ID : 264330351980

Option 4 ID : 264330351979

Status : Answered

Chosen Option : 4

Q.12 Select the option that is related to the fifth letter-cluster in the same way as the second letter-cluster is related to the first letter-cluster and the fourth letter-cluster is related to the third letter-cluster.

KEEP : SHHN :: HIDE : HGLK :: EXIT : ?

Ans

✗ 1. XLAH

✗ 2. WMBH

✓ 3. WLAH

✗ 4. WLAI

Question ID : 26433076453

Option 1 ID : 264330299878

Option 2 ID : 264330299877

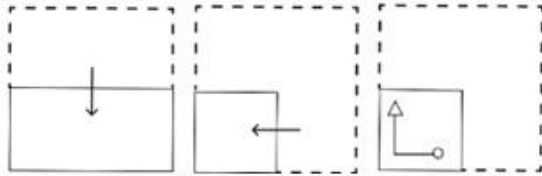
Option 3 ID : 264330299879

Option 4 ID : 264330299876

Status : Answered

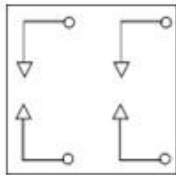
Chosen Option : 3

Q.13 A paper is folded and cut as shown below. How will it appear when unfolded?

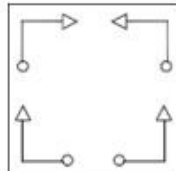


Ans

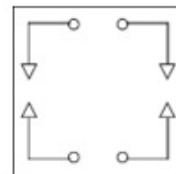
✗ 1.



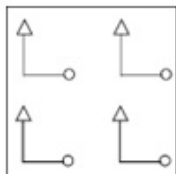
✗ 2.



✓ 3.



✗ 4.



Question ID : 264330114714

Option 1 ID : 264330450944

Option 2 ID : 264330450942

Option 3 ID : 264330450941

Option 4 ID : 264330450943

Status : Answered

Chosen Option : 3

Q.14 Select the set in which the numbers are NOT related in the same way as are the numbers of the following sets.

(59, 236, 175), (24, 124, 98)

(NOTE: Operations should be performed on the whole numbers, without breaking down the numbers into its constituent digits.)

Ans ✗ 1. (22, 183, 159)

✓ 2. (21, 124, 108)

✗ 3. (64, 182, 116)

✗ 4. (16, 206, 188)

Question ID : 26433097244

Option 1 ID : 264330381675

Option 2 ID : 264330381673

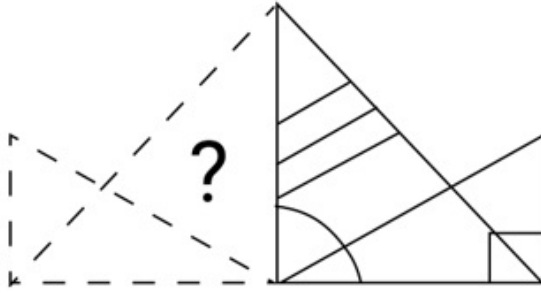
Option 3 ID : 264330381676

Option 4 ID : 264330381674

Status : Answered

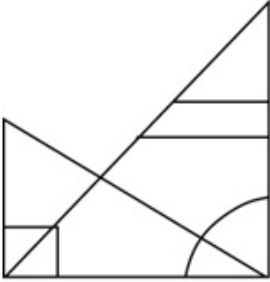
Chosen Option : 4

Q.15 Select the figure from the options that can replace the question mark (?) and complete the given pattern.

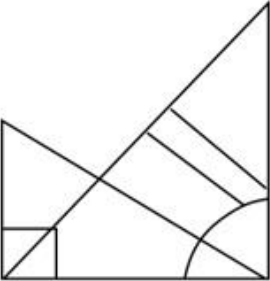


Ans

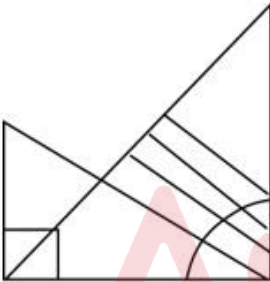
✗ 1.



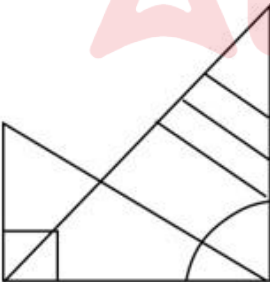
✗ 2.



✗ 3.



✓ 4.



Question ID : 264330106481

Option 1 ID : 264330418225

Option 2 ID : 264330418227

Option 3 ID : 264330418228

Option 4 ID : 264330418226

Status : Answered

Chosen Option : 4

Q.16 Select the correct mirror image of the given figure when the mirror is placed at MN as shown below.



Ans

- ☒ 1. X4502TAU
☒ 2. X4202TAN
☒ 3. X4202TAU
☒ 4. X4202TAU

Question ID : 264330126676

Option 1 ID : 264330496377

Option 2 ID : 264330496376

Option 3 ID : 264330496379

Option 4 ID : 264330496378

Status : Answered

Chosen Option : 3

Q.17 Select the correct combination of mathematical signs to sequentially replace the * signs and to balance the given equation.
 $11 * 12 * 70 * 175 * 5 * 97$

Ans

- ☒ 1. $\times, +, -, \div, =$
☒ 2. $\times, -, +, \div, =$
☒ 3. $+, \times, -, \div, =$
☒ 4. $\times, -, +, =, +$

Question ID : 26433076551

Option 1 ID : 264330300269

Option 2 ID : 264330300268

Option 3 ID : 264330300270

Option 4 ID : 264330300271

Status : Answered

Chosen Option : 2

Q.18 C, D, E, F, G and H were six women, sitting around a circular table, equidistant from each other, facing the centre. D and E were sitting immediately next to each other. F and H were sitting immediately next to each other. G was to the immediate right of C. E was to the immediate right of F. D was to the immediate left of C. Who among the following was sitting third to the left of D?

- Ans
- ☒ 1. F
 - ☒ 2. G
 - ☒ 3. C
 - ☒ 4. H

Question ID : 26433087010
 Option 1 ID : 264330341681
 Option 2 ID : 264330341683
 Option 3 ID : 264330341684
 Option 4 ID : 264330341682
 Status : Answered
 Chosen Option : 4

Q.19 Which of the following options will replace the question mark (?) in the given series?
 13, 104, 52, 416, 208, ?, 832

- Ans
- ☒ 1. 1664
 - ☒ 2. 1158
 - ☒ 3. 790
 - ☒ 4. 690

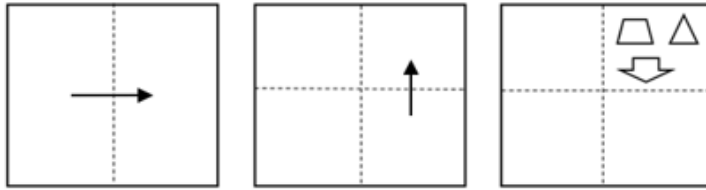
Question ID : 264330109435
 Option 1 ID : 264330430020
 Option 2 ID : 264330430018
 Option 3 ID : 264330430019
 Option 4 ID : 264330430017
 Status : Answered
 Chosen Option : 1

Q.20 Which of the following letter clusters will replace the question mark (?) in the given series to make it logically complete?
 RTE, PVC, NXA, LZY, ?

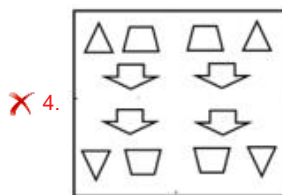
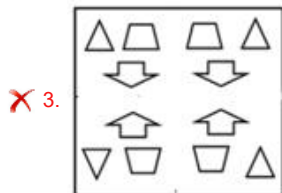
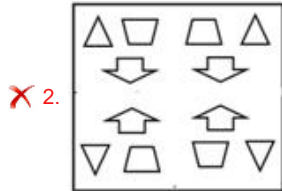
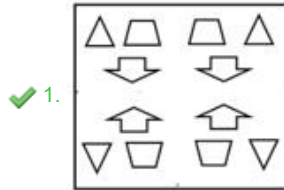
- Ans
- ☒ 1. JBW
 - ☒ 2. JBX
 - ☒ 3. KXV
 - ☒ 4. JBA

Question ID : 264330102230
 Option 1 ID : 264330401385
 Option 2 ID : 264330401387
 Option 3 ID : 264330401388
 Option 4 ID : 264330401386
 Status : Answered
 Chosen Option : 1

Q.21 A paper is folded and cut as shown below. How will it appear when unfolded?



Ans



Question ID : 264330113647

Option 1 ID : 264330446674

Option 2 ID : 264330446676

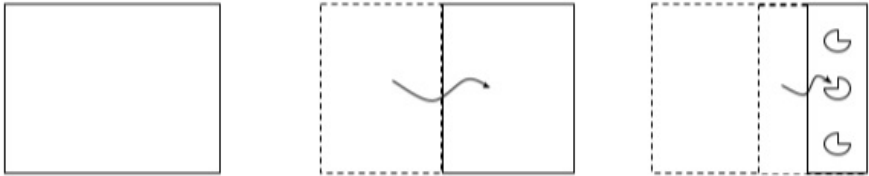
Option 3 ID : 264330446675

Option 4 ID : 264330446673

Status : Answered

Chosen Option : 1

Q.22 A paper is folded and cut as shown below. How will it appear when unfolded?



Ans

- ✓ 1.
- ✗ 2.
- ✗ 3.
- ✗ 4.

Question ID : 264330118716

Option 1 ID : 264330466117

Option 2 ID : 264330466116

Option 3 ID : 264330466118

Option 4 ID : 264330466115

Status : Answered

Chosen Option : 1

Q.23 Select the option that is related to the fourth term in the same way as the first term is related to the second term and the fifth term is related to the sixth term.
 $8 : 199 :: ? : 439 :: 5 : 82$

- ✗ 1. 16
- ✗ 2. 14
- ✓ 3. 12
- ✗ 4. 10

Question ID : 26433059943

Option 1 ID : 264330234607

Option 2 ID : 264330234606

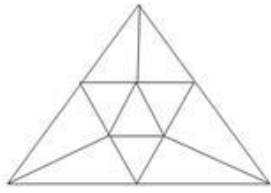
Option 3 ID : 264330234605

Option 4 ID : 264330234604

Status : Not Answered

Chosen Option : --

Q.24 How many triangles are there in the following figure?



- Ans
- ☒ 1. 18
 - ☒ 2. 12
 - ☒ 3. 15
 - ☒ 4. 10

Question ID : 26433076732
 Option 1 ID : 264330300995
 Option 2 ID : 264330300993
 Option 3 ID : 264330300994
 Option 4 ID : 264330300992
 Status : Answered
 Chosen Option : 3

Q.25 Which figure should replace the question mark (?) if the series were to be continued?

Z	L	T	3	L	T	3	O	
	O		Z		P		L	?
3		T	L	O	O	3	T	P

Ans

- ☒ 1.

P	T
	O
L	3
- ☒ 2.

O	P
	☆
3	T
- ☒ 3.

T	3
	☆
P	O
- ☒ 4.

O	P
	L
3	T

Question ID : 264330130812
 Option 1 ID : 264330512360
 Option 2 ID : 264330512361
 Option 3 ID : 264330512359
 Option 4 ID : 264330512362
 Status : Not Answered
 Chosen Option : --

Q.1 A hemispherical bowl is made of steel whose thickness is 2 cm. The inside radius of the bowl is 3 cm. Find the volume (in cm^3) of the steel used in making the bowl. (Rounded off to 2 decimal places)

(Take $\pi = \frac{22}{7}$)

- Ans
- ☒ 1. 245.14
 - ☒ 2. 280.75
 - ☒ 3. 211.25
 - ☒ 4. 205.33

Question ID : 264330112432

Option 1 ID : 264330441815

Option 2 ID : 264330441813

Option 3 ID : 264330441816

Option 4 ID : 264330441814

Status : Answered

Chosen Option : 4

Q.2 What is the difference (in ₹) between the compound interest, when interest is compounded 6-monthly, and the simple interest on a sum of ₹10,000 for $1\frac{1}{2}$ years at 10% p.a.?

- Ans
- ☒ 1. 75.26
 - ☒ 2. 76.25
 - ☒ 3. 71.65
 - ☒ 4. 72.65

Question ID : 264330103676

Option 1 ID : 264330407012

Option 2 ID : 264330407011

Option 3 ID : 264330407009

Option 4 ID : 264330407010

Status : Answered

Chosen Option : 2

Q.3 The smallest 4-digit prime number is:

- Ans
- ☒ 1. 1009
 - ☒ 2. 1007
 - ☒ 3. 1003
 - ☒ 4. 1001

Question ID : 264330104479

Option 1 ID : 264330410219

Option 2 ID : 264330410220

Option 3 ID : 264330410218

Option 4 ID : 264330410217

Status : Answered

Chosen Option : 3

Q.4 14 men can complete a piece of work in 6 days, while 20 women can complete the same work in 8 days. 7 men started working on the job, and after working for 3 days all of them stopped working. How many women should be put on the job to complete the remaining work, if it is to be completed in 6 days?

Ans ☒ 1. 20

☐ 2. 25

☐ 3. 15

☐ 4. 30

Question ID : 264330103745

Option 1 ID : 264330407286

Option 2 ID : 264330407287

Option 3 ID : 264330407285

Option 4 ID : 264330407288

Status : Answered

Chosen Option : 1

Q.5 What is the greatest possible length (in cm) of scale to measure exactly the following lengths : 1 m, 20 cm, 3 m, 90 cm?

Ans ☒ 1. 30

☐ 2. 10

☐ 3. 45

☐ 4. 50

Question ID : 264330119496

Option 1 ID : 264330468267

Option 2 ID : 264330468269

Option 3 ID : 264330468268

Option 4 ID : 264330468270

Status : Answered

Chosen Option : 2

Q.6 By selling an article, a shopkeeper makes a profit of 30% of its selling price. Find his profit percentage.

Ans ☐ 1. 40%

☐ 2. $46\frac{1}{3}\%$

☒ 3. $42\frac{6}{7}\%$

☐ 4. 44%

Question ID : 264330111461

Option 1 ID : 264330437929

Option 2 ID : 264330437932

Option 3 ID : 264330437930

Option 4 ID : 264330437931

Status : Answered

Chosen Option : 3

Q.7 Find the total percentage change in the volume of a cuboid if its length and breadth are decreased by 10% and 20%, respectively, while its height is increased by 30%.

Ans ☒ 1. 6.4%

☐ 2. 8.2%

☐ 3. 9.1%

☐ 4. 8.6%

Question ID : 264330103698

Option 1 ID : 264330407097

Option 2 ID : 264330407098

Option 3 ID : 264330407099

Option 4 ID : 264330407100

Status : Answered

Chosen Option : 1

Q.8 Trader A offers a discount of 25% on the marked price for cash purchase. Trader B offers a trade discount of 20% and a cash discount of 4% on the same article marked at the same price as that of Trader A. If the discount given by Trader A is ₹360 more than the discount given by Trader B, then what is the marked price of the item (in rupees)?

Ans ☐ 1. 19,000

☐ 2. 18,000

☐ 3. 30,000

☒ 4. 20,000

Question ID : 264330131351

Option 1 ID : 264330514518

Option 2 ID : 264330514516

Option 3 ID : 264330514515

Option 4 ID : 264330514517

Status : Answered

Chosen Option : 4

Q.9 If the average of 8, 6, 14, 7 and x is 11, then the value of x is:

Ans ☐ 1. 18

☒ 2. 20

☐ 3. 22

☐ 4. 15

Question ID : 264330118197

Option 1 ID : 264330464604

Option 2 ID : 264330464605

Option 3 ID : 264330464606

Option 4 ID : 264330464603

Status : Answered

Chosen Option : 2

Q.10 A policeman chases a thief. The speed of the policeman and thief is 8 km/h and 7 km/h, respectively. If the policeman started 6 minutes late, after running how much distance will he be able to catch the thief?

- Ans ☒ 1. 5.5 km
☒ 2. 5.6 km
☒ 3. 6 km
☒ 4. 6.3 km

Question ID : 264330183832

Option 1 ID : 264330721004

Option 2 ID : 264330721005

Option 3 ID : 264330721006

Option 4 ID : 264330721007

Status : Answered

Chosen Option : 2

Q.11 Simplify $1.6 + 1.2 \times \frac{1}{4} - \{\frac{1}{5} + (1 - 0.8)\}$.

- Ans ☒ 1. 1.5
☒ 2. 1.4
☒ 3. 1.6
☒ 4. 1.8

Question ID : 264330104216

Option 1 ID : 264330409167

Option 2 ID : 264330409166

Option 3 ID : 264330409168

Option 4 ID : 264330409165

Status : Answered

Chosen Option : 3

Q.12 A person took a loan of ₹1,200 on simple interest for as many years as the rate of interest. If he paid ₹432 as interest at the end of the loan period, what was the rate of interest per annum?

- Ans ☒ 1. 9%
☒ 2. 8%
☒ 3. 5%
☒ 4. 6%

Question ID : 264330119420

Option 1 ID : 264330467967

Option 2 ID : 264330467969

Option 3 ID : 264330467968

Option 4 ID : 264330467970

Status : Answered

Chosen Option : 4

Q.13 एक सभा में 350 स्काउट्स को दूध परोसा गया। उनमें से प्रत्येक को 10 cm आधार त्रिज्या और 15 cm ऊँचाई वाले बेलनाकार गिलास में दूध दिया गया। यदि दाता ने ₹50 प्रति लीटर की दर से दूध खरीदा, तो कितनी राशि खर्च की गई? (बेलनाकार कागज के गिलास आदि की कीमत पर ध्यान न दें)

- Ans
- ☒ 1. ₹80,000
 - ☒ 2. ₹82,500
 - ☒ 3. ₹81,000
 - ☒ 4. ₹83,000

Question ID : 26433090273

Option 1 ID : 264330354569

Option 2 ID : 264330354571

Option 3 ID : 264330354570

Option 4 ID : 264330354572

Status : Answered

Chosen Option : 2

Q.14 Ajay's test marks in two subjects, Mathematics and Science, are in the ratio 9 : 13. If he got 16 marks more in Science than in Mathematics, what are his marks in Mathematics?

- Ans
- ☒ 1. 27
 - ☒ 2. 36
 - ☒ 3. 54
 - ☒ 4. 45

Question ID : 264330129425

Option 1 ID : 264330507068

Option 2 ID : 264330507067

Option 3 ID : 264330507069

Option 4 ID : 264330507066

Status : Answered

Chosen Option : 2

Q.15 A man loses 25% of his money. After spending 60% of the remaining money, he has ₹360 left. What is the amount of money (in ₹) he originally had?

- Ans
- ☒ 1. 1200
 - ☒ 2. 1962
 - ☒ 3. 654
 - ☒ 4. 2400

Question ID : 264330104238

Option 1 ID : 264330409254

Option 2 ID : 264330409253

Option 3 ID : 264330409255

Option 4 ID : 264330409256

Status : Answered

Chosen Option : 1

Q.1 Which of the following is an address on the world wide web that is used to access specific web resources and is the specific path to a resource?

- Ans
- ☒ 1. Hyperlink
 - ☒ 2. Web server
 - ☒ 3. Web pages
 - ☒ 4. Uniform resource locator

Question ID : 264330180809
 Option 1 ID : 264330709199
 Option 2 ID : 264330709202
 Option 3 ID : 264330709201
 Option 4 ID : 264330709200
 Status : Answered
 Chosen Option : 4

Q.2 The keyboard shortcut for opening a new document in Microsoft Word 365, while another document is already open, is _____.

- Ans
- ☒ 1. Ctrl + N
 - ☒ 2. Ctrl + Y
 - ☒ 3. Ctrl + S
 - ☒ 4. Ctrl + P

Question ID : 264330182072
 Option 1 ID : 264330714128
 Option 2 ID : 264330714130
 Option 3 ID : 264330714127
 Option 4 ID : 264330714129
 Status : Answered
 Chosen Option : 1

Q.3 Which of the following is NOT used to edit text in MS-Word 365?

- Ans
- ☒ 1. Making text as Bold/Italic
 - ☒ 2. Changing Font Color
 - ☒ 3. Making text as Left align
 - ☒ 4. Changing Font Style

Question ID : 264330178285
 Option 1 ID : 264330699197
 Option 2 ID : 264330699196
 Option 3 ID : 264330699198
 Option 4 ID : 264330699195
 Status : Answered
 Chosen Option : 3

Q.4 Which of the following tabs in MS Word 365, allows you to customise the page size in the Page Setup dialog box?

- Ans
- ☒ 1. Layout
 - ☒ 2. File
 - ☒ 3. Edit
 - ☒ 4. Insert

Question ID : 264330180429
 Option 1 ID : 264330707685
 Option 2 ID : 264330707684
 Option 3 ID : 264330707683
 Option 4 ID : 264330707686
 Status : Answered
 Chosen Option : 4

Q.5 While composing an email, what does the user have to write in the 'Subject' field?

- Ans
- ☒ 1. A smiley or emoji to make the email more interesting
 - ☒ 2. The recipient's email address
 - ☒ 3. The main topic of an email message
 - ☒ 4. The sender's email address

Question ID : 264330182094
 Option 1 ID : 264330714218
 Option 2 ID : 264330714215
 Option 3 ID : 264330714216
 Option 4 ID : 264330714217
 Status : Answered
 Chosen Option : 3

Q.6 Which of the following document settings can be changed from the layout tab of MS word 365?

- Ans
- ☒ 1. Change styles
 - ☒ 2. Margins
 - ☒ 3. Macros
 - ☒ 4. Spelling grammar

Question ID : 264330175982
 Option 1 ID : 264330690226
 Option 2 ID : 264330690223
 Option 3 ID : 264330690224
 Option 4 ID : 264330690225
 Status : Answered
 Chosen Option : 3

Q.7 Which Microsoft Excel 365, function is used to join or concatenate text strings from different cells?

- Ans
- ☒ 1. CONCATENATE
 - ☒ 2. MERGE
 - ☒ 3. ADD
 - ☒ 4. JOIN

Question ID : 264330180692
 Option 1 ID : 264330708735
 Option 2 ID : 264330708737
 Option 3 ID : 264330708736
 Option 4 ID : 264330708738
 Status : Answered
 Chosen Option : 2

Q.8 Which of the following statements about autofitting the row height in MS Excel 365 is correct?

- Ans ☒ 1. Single-clicking on the boundary between row headers will automatically adjust the row height to fit the content.
- ☒ 2. Double-clicking on the boundary between row headers will automatically adjust the row height to fit the content.
- ☒ 3. Double-clicking on the boundary between column headers will automatically adjust the column height to fit the content.
- ☒ 4. Single-clicking on the boundary between column headers will automatically adjust the column height to fit the content.

Question ID : 264330180824

Option 1 ID : 264330709262

Option 2 ID : 264330709259

Option 3 ID : 264330709261

Option 4 ID : 264330709260

Status : Not Answered

Chosen Option : --

Q.9 In MS Excel 365, Which function from the following list is used to tally the quantity of empty cells within a specified cell range?

- Ans ☒ 1. COUNTB()
- ☒ 2. COUNTA()
- ☒ 3. COUNT()
- ☒ 4. COUNTBLANK()

Question ID : 264330179437

Option 1 ID : 264330703754

Option 2 ID : 264330703752

Option 3 ID : 264330703751

Option 4 ID : 264330703753

Status : Answered

Chosen Option : 2

Q.10 Which of the following is used to print the document in MS-Word 365?

- Ans ☒ 1. File->print
- ☒ 2. Design->print
- ☒ 3. Home->print
- ☒ 4. View->print

Question ID : 264330178279

Option 1 ID : 264330699171

Option 2 ID : 264330699173

Option 3 ID : 264330699172

Option 4 ID : 264330699174

Status : Answered

Chosen Option : 3