

## Constable Executive Male and Female in Delhi Police Examination 2023

Roll Number	
Candidate Name	
Venue Name	
Exam Date	03/12/2023
Exam Time	3:00 PM - 4:30 PM
Subject	Constable Executive Male and Female in Delhi Police Examination 2023

### Section : General Knowledge

**Q.1 Who among the following was NOT a gold medallist at the Commonwealth Games- 2022?**

- Ans**
- ☒ 1. Naveen Kumar
  - ☒ 2. Ravi Dahiya
  - ☒ 3. Pooja Gehlot
  - ☒ 4. Vinesh Phogat

Question ID : 264330113737  
 Option 1 ID : 264330447034  
 Option 2 ID : 264330447033  
 Option 3 ID : 264330447036  
 Option 4 ID : 264330447035  
 Status : Not Answered  
 Chosen Option : --

**Q.2 WACA Cricket Ground is located in \_\_\_\_\_.**

- Ans**
- ☒ 1. Mumbai
  - ☒ 2. Perth
  - ☒ 3. London
  - ☒ 4. Sydney

Question ID : 264330110372  
 Option 1 ID : 264330433766  
 Option 2 ID : 264330433767  
 Option 3 ID : 264330433765  
 Option 4 ID : 264330433768  
 Status : Not Answered  
 Chosen Option : --

**Q.3 The mob-burning of a police station in Chauri Chaura in 1922 brought about the end of the Non-Cooperation Movement. In which present-day state is Chauri Chaura located?**

- Ans**
- ☒ 1. Bihar
  - ☒ 2. Punjab
  - ☒ 3. Haryana
  - ☒ 4. Uttar Pradesh

Question ID : 264330118998  
 Option 1 ID : 264330466649  
 Option 2 ID : 264330466647  
 Option 3 ID : 264330466648  
 Option 4 ID : 264330466650  
 Status : Answered  
 Chosen Option : 4

# Test Prime

**ALL EXAMS,  
ONE SUBSCRIPTION**



**70,000+**  
Mock Tests



**Personalised  
Report Card**



**Unlimited  
Re-Attempt**



**600+**  
Exam Covered



**Previous Year  
Papers**



**500%  
Refund**



**ATTEMPT FREE MOCK NOW**

Q.4 What is the general circulation of the atmosphere?

- Ans ☒ 1. The pattern of the movement of the surface winds.  
☒ 2. The pattern of the movement of the planetary winds.  
☒ 3. The pattern of the movement of the water.  
☒ 4. The pattern of the movement of the energy.

Question ID : 264330116377  
Option 1 ID : 264330457596  
Option 2 ID : 264330457595  
Option 3 ID : 264330457594  
Option 4 ID : 264330457593  
Status : Answered  
Chosen Option : 1

Q.5 The term 'secular' was added to the Preamble of the Constitution of India by the 42nd Constitutional Amendment Act in the year \_\_\_\_\_.

- Ans ☒ 1. 1978  
☒ 2. 1975  
☒ 3. 1974  
☒ 4. 1976

Question ID : 264330130431  
Option 1 ID : 264330510838  
Option 2 ID : 264330510836  
Option 3 ID : 264330510835  
Option 4 ID : 264330510837  
Status : Answered  
Chosen Option : 4

Q.6 During the Mughal period, what were the farmers called who cultivate their own land?

- Ans ☒ 1. Zamindar  
☒ 2. Muzarain  
☒ 3. Khud kashta  
☒ 4. Pahi Kasht

Question ID : 264330120426  
Option 1 ID : 264330471955  
Option 2 ID : 264330471958  
Option 3 ID : 264330471956  
Option 4 ID : 264330471957  
Status : Not Answered  
Chosen Option : --

Q.7 In which of the following sessions of the Indian National Congress was the demand for 'Swaraj' put forward for the first time?

- Ans ☒ 1. Calcutta  
☒ 2. Bombay  
☒ 3. Bankipur  
☒ 4. Karachi

Question ID : 264330114859  
Option 1 ID : 264330451522  
Option 2 ID : 264330451523  
Option 3 ID : 264330451524  
Option 4 ID : 264330451521  
Status : Answered  
Chosen Option : 4

Q.8 Tippi is a well-known dance of which of the following states?

- Ans ☒ 1. Gujarat  
☒ 2. Punjab  
☒ 3. Rajasthan  
☒ 4. Madhya Pradesh

Question ID : 264330110419  
 Option 1 ID : 264330433955  
 Option 2 ID : 264330433954  
 Option 3 ID : 264330433953  
 Option 4 ID : 264330433956  
 Status : Answered  
 Chosen Option : 1

Q.9 Where is the headquarter of the WTO located?

- Ans ☒ 1. Washington, D.C.  
☒ 2. New York  
☒ 3. Rome  
☒ 4. Geneva

Question ID : 26433097098  
 Option 1 ID : 264330381092  
 Option 2 ID : 264330381091  
 Option 3 ID : 264330381089  
 Option 4 ID : 264330381090  
 Status : Answered  
 Chosen Option : 1

Q.10 Name the first Indian woman who became the President of the Indian National Congress.

- Ans ☒ 1. Rani Velu Nachiyar  
☒ 2. Sarojini Naidu  
☒ 3. Annie Besant  
☒ 4. Sarala Devi Chaudhurani

Question ID : 264330171709  
 Option 1 ID : 264330673442  
 Option 2 ID : 264330673440  
 Option 3 ID : 264330673439  
 Option 4 ID : 264330673441  
 Status : Answered  
 Chosen Option : 2

Q.11 Which genus of the Rhodophyceae family possesses an erect series of branches and a filamentous prostrate section attached to the substratum by means of unicellular rhizoids?

- Ans ☒ 1. Polysiphonia  
☒ 2. Dictyota  
☒ 3. Laminaria  
☒ 4. Sargassum

Question ID : 264330130980  
 Option 1 ID : 264330513033  
 Option 2 ID : 264330513032  
 Option 3 ID : 264330513031  
 Option 4 ID : 264330513034  
 Status : Answered  
 Chosen Option : 4

Q.12 Which type of title can be conferred by the state as per Article 18 of the Constitution of India?

- Ans
- ☒ 1. Sports and Music
  - ☒ 2. Religious and Music
  - ☒ 3. Military and Academic
  - ☒ 4. Military and Social

Question ID : 264330183151  
 Option 1 ID : 264330718339  
 Option 2 ID : 264330718338  
 Option 3 ID : 264330718337  
 Option 4 ID : 264330718336  
 Status : Answered  
 Chosen Option : 3

Q.13 'Files and Ranks' are used in which of the following games?

- Ans
- ☒ 1. Cricket
  - ☒ 2. Chess
  - ☒ 3. Badminton
  - ☒ 4. Hockey

Question ID : 264330132559  
 Option 1 ID : 264330519331  
 Option 2 ID : 264330519333  
 Option 3 ID : 264330519332  
 Option 4 ID : 264330519334  
 Status : Answered  
 Chosen Option : 2

Q.14 The Swaran Singh Committee had suggested the incorporation of a total of \_\_\_\_\_ Fundamental Duties.

- Ans
- ☒ 1. 10
  - ☒ 2. 14
  - ☒ 3. 13
  - ☒ 4. 8

Question ID : 264330114750  
 Option 1 ID : 264330451087  
 Option 2 ID : 264330451085  
 Option 3 ID : 264330451086  
 Option 4 ID : 264330451088  
 Status : Answered  
 Chosen Option : 4

Q.15 Which of the following was/were the limitation(s) of the Green Revolution?

- A. Confined to limited crops  
B. Uneven spread

Ans ☒ 1. Only B  
☒ 2. Neither A nor B  
☒ 3. Both A and B  
☒ 4. Only A

Question ID : 264330109113

Option 1 ID : 264330428730

Option 2 ID : 264330428732

Option 3 ID : 264330428731

Option 4 ID : 264330428729

Status : Answered

Chosen Option : 1

Q.16 Up to which financial year has the 'New India Literacy Programme' been launched to impart foundational literacy and numeracy, critical life skills, vocational skills, basic and continuing education?

Ans ☒ 1. FY 2027  
☒ 2. FY 2029  
☒ 3. FY 2026  
☒ 4. FY 2025

Question ID : 264330111582

Option 1 ID : 264330438414

Option 2 ID : 264330438416

Option 3 ID : 264330438415

Option 4 ID : 264330438413

Status : Not Answered

Chosen Option : --

Q.17 Which statement gives the details of the estimated revenue and expenditure of the government?

Ans ☒ 1. Income statement  
☒ 2. Balance sheet  
☒ 3. Annual financial statement  
☒ 4. Balance of payments

Question ID : 264330120868

Option 1 ID : 264330473690

Option 2 ID : 264330473688

Option 3 ID : 264330473689

Option 4 ID : 264330473687

Status : Answered

Chosen Option : 4

Q.18 A pilot project of linking Self-Help-Groups with banks was launched by NABARD. The success of the pilot project resulted in the introduction of three radical innovations by RBI/NABARD. Which of the following is NOT one of them?

- Ans ☒ 1. Permission to lend to groups without specification of purpose/activity/project
- ☒ 2. Avoidance of action in the event of defaults
- ☒ 3. Acceptance of informal groups as clients of banks – both, for savings and credit linkage
- ☒ 4. Introduction of collateral-free lending

Question ID : 264330112458

Option 1 ID : 264330441920

Option 2 ID : 264330441919

Option 3 ID : 264330441917

Option 4 ID : 264330441918

Status : Answered

Chosen Option : 1

Q.19 Pandit Ajoy Chakrabarty, who was conferred with Padma Bhushan in 2020, is a veteran vocalist of the \_\_\_\_\_ Gharana.

- Ans ☒ 1. Kirana
- ☒ 2. Rangeela
- ☒ 3. Gwalior
- ☒ 4. Patiala

Question ID : 264330112684

Option 1 ID : 264330442821

Option 2 ID : 264330442824

Option 3 ID : 264330442823

Option 4 ID : 264330442822

Status : Answered

Chosen Option : 1

Q.20 Indian Foreign Services and Indian Revenue Services come under which type of Civil Service?

- Ans ☒ 1. State services
- ☒ 2. Central services
- ☒ 3. Multinational services
- ☒ 4. Federal services

Question ID : 264330158682

Option 1 ID : 264330622088

Option 2 ID : 264330622089

Option 3 ID : 264330622090

Option 4 ID : 264330622087

Status : Answered

Chosen Option : 2

Q.21 Which of the following economic reforms were initiated by the government under their liberalisation policy?

- Ans ☒ 1. Industrial and agricultural sector reforms  
☒ 2. Industrial, agricultural and financial sector reforms  
☒ 3. Industrial and financial sector reforms  
☒ 4. Agricultural and financial sector reforms

Question ID : 264330110020  
 Option 1 ID : 264330432360  
 Option 2 ID : 264330432358  
 Option 3 ID : 264330432357  
 Option 4 ID : 264330432359  
 Status : Answered  
 Chosen Option : 2

Q.22 Prarthana Samaj was established at Bombay in the year \_\_\_\_\_.

- Ans ☒ 1. 1537  
☒ 2. 1937  
☒ 3. 1867  
☒ 4. 1737

Question ID : 264330123750  
 Option 1 ID : 264330485038  
 Option 2 ID : 264330485036  
 Option 3 ID : 264330485035  
 Option 4 ID : 264330485037  
 Status : Answered  
 Chosen Option : 3

Q.23 'A Passage to India', a novel about the British Empire, was written by which of the following authors?

- Ans ☒ 1. James Joyce  
☒ 2. Sinclair Lewis  
☒ 3. Anita Loos  
☒ 4. EM Forster

Question ID : 26433055375  
 Option 1 ID : 264330216485  
 Option 2 ID : 264330216484  
 Option 3 ID : 264330216486  
 Option 4 ID : 264330216487  
 Status : Answered  
 Chosen Option : 4

Q.24 As per Human Development Report 2021-22, what is the percentage of population under severe multi-dimensional poverty?

- Ans ☒ 1. 51.3%  
☒ 2. 8.8%  
☒ 3. 41.3%  
☒ 4. 31.3%

Question ID : 264330179559  
 Option 1 ID : 264330704237  
 Option 2 ID : 264330704238  
 Option 3 ID : 264330704235  
 Option 4 ID : 264330704236  
 Status : Not Answered  
 Chosen Option : --



Q.25 The ICAR-Central Institute for Cotton Research is located in \_\_\_\_\_.

- Ans
- ☒ 1. Hyderabad
  - ☒ 2. Bhopal
  - ☒ 3. Jaipur
  - ☒ 4. Nagpur

Question ID : 264330119880  
 Option 1 ID : 264330469795  
 Option 2 ID : 264330469797  
 Option 3 ID : 264330469796  
 Option 4 ID : 264330469798  
 Status : Answered  
 Chosen Option : 1

Q.26 The terms, 'Aus', 'Aman' and 'Boro', are associated with which crop in West Bengal?

- Ans
- ☒ 1. Maize
  - ☒ 2. Rice
  - ☒ 3. Tea
  - ☒ 4. Wheat

Question ID : 264330180574  
 Option 1 ID : 264330708264  
 Option 2 ID : 264330708263  
 Option 3 ID : 264330708265  
 Option 4 ID : 264330708266  
 Status : Answered  
 Chosen Option : 2

Q.27 Mauryan emperor Ashoka conquered Kalinga, which is currently known as \_\_\_\_\_.

- Ans
- ☒ 1. Odisha
  - ☒ 2. Bengal
  - ☒ 3. Uttar Pradesh
  - ☒ 4. Bihar

Question ID : 264330118954  
 Option 1 ID : 264330466471  
 Option 2 ID : 264330466474  
 Option 3 ID : 264330466473  
 Option 4 ID : 264330466472  
 Status : Answered  
 Chosen Option : 1

Q.28 Which of the following is NOT a feature of Fundamental Duties?

- Ans
- ☒ 1. They are both, civic and moral in nature.
  - ☒ 2. They emphasize on respecting Indian culture.
  - ☒ 3. They are justiciable.
  - ☒ 4. They are not applicable to foreigners.

Question ID : 264330110569  
 Option 1 ID : 264330434553  
 Option 2 ID : 264330434554  
 Option 3 ID : 264330434555  
 Option 4 ID : 264330434556  
 Status : Answered  
 Chosen Option : 3

**Q.29** As per data released by Centre for Monitoring Indian Economy (CMIE) for the month of December 2022, \_\_\_\_\_ recorded the lowest unemployment at 0.9%.

- Ans** ☒ 1. Odisha  
☒ 2. Haryana  
☒ 3. Madhya Pradesh  
☒ 4. Rajasthan

Question ID : 264330177915  
 Option 1 ID : 264330697750  
 Option 2 ID : 264330697747  
 Option 3 ID : 264330697749  
 Option 4 ID : 264330697748  
 Status : Not Answered  
 Chosen Option : --

**Q.30** Which of the following soil varieties is favourable for the growth of mangroves and deltaic vegetation?

- Ans** ☒ 1. Desert soil  
☒ 2. Fine clay and alluvial soil  
☒ 3. Black soil  
☒ 4. Laterite soil

Question ID : 264330178015  
 Option 1 ID : 264330698135  
 Option 2 ID : 264330698138  
 Option 3 ID : 264330698136  
 Option 4 ID : 264330698137  
 Status : Answered  
 Chosen Option : 2

**Q.31** Har Ghar Tiranga campaign was launched for which of the following national day celebrations?

- Ans** ☒ 1. Gandhi Jayanti  
☒ 2. Independence Day  
☒ 3. Children's Day  
☒ 4. Republic Day

Question ID : 264330118265  
 Option 1 ID : 264330464876  
 Option 2 ID : 264330464875  
 Option 3 ID : 264330464878  
 Option 4 ID : 264330464877  
 Status : Answered  
 Chosen Option : 2

**Q.32** U Srinivas is associated with which musical instrument?

- Ans** ☒ 1. Kanjra  
☒ 2. Shehnai  
☒ 3. Violin  
☒ 4. Mandolin

Question ID : 264330111194  
 Option 1 ID : 264330436863  
 Option 2 ID : 264330436861  
 Option 3 ID : 264330436864  
 Option 4 ID : 264330436862  
 Status : Not Answered  
 Chosen Option : --

Q.33 As of October 2022, which of the following is a Stupa site excavated in the state of Karnataka?

- Ans
- ☒ 1. Sanchi
  - ☒ 2. Amravati
  - ☒ 3. Guntapalle
  - ☒ 4. Sannati

Question ID : 264330109628  
 Option 1 ID : 264330430789  
 Option 2 ID : 264330430790  
 Option 3 ID : 264330430792  
 Option 4 ID : 264330430791  
 Status : Not Answered  
 Chosen Option : --

Q.34 Who among the following personalities is associated with Odissi dance?

- Ans
- ☒ 1. Surupa Sen
  - ☒ 2. Jatin Goswami
  - ☒ 3. Yamini Krishnamurthy
  - ☒ 4. Ishira Parikh

Question ID : 264330132401  
 Option 1 ID : 264330518699  
 Option 2 ID : 264330518701  
 Option 3 ID : 264330518702  
 Option 4 ID : 264330518700  
 Status : Answered  
 Chosen Option : 4

Q.35 Carbonated beverages contain \_\_\_\_\_.

- Ans
- ☒ 1. N<sub>2</sub>
  - ☒ 2. O<sub>2</sub>
  - ☒ 3. CH<sub>4</sub>
  - ☒ 4. CO<sub>2</sub>

Question ID : 264330117615  
 Option 1 ID : 264330462486  
 Option 2 ID : 264330462487  
 Option 3 ID : 264330462488  
 Option 4 ID : 264330462485  
 Status : Answered  
 Chosen Option : 4

Q.36 Consider the following groups of elements:  
A:  $^{12}_6C$  and  $^{14}_6C$  C:  $^{40}_{16}S$  and  $^{40}_{17}Cl$

B:  $^{16}_8O$  and  $^{18}_8O$  D:  $^{14}_6C$  and  $^{14}_7N$

Which of the following identifications regarding the given groups is correct?

- Ans
- ☒ 1. Isotopes: A and D  
Isobars: B and C
  - ☒ 2. Isotopes: A and C  
Isobars: B and D
  - ☒ 3. Isotopes: A and B  
Isobars: C and D
  - ☒ 4. Isotopes: C and D  
Isobars: A and B

Question ID : 264330177025

Option 1 ID : 264330694296

Option 2 ID : 264330694295

Option 3 ID : 264330694298

Option 4 ID : 264330694297

Status : Answered

Chosen Option : 3

Q.37 What is the full form of 'ICC'?

- Ans
- ☒ 1. International Cricket Council
  - ☒ 2. Indian Cricket Council
  - ☒ 3. International Committee for Cricket
  - ☒ 4. Internal Cricket Committee

Question ID : 264330113764

Option 1 ID : 264330447141

Option 2 ID : 264330447142

Option 3 ID : 264330447144

Option 4 ID : 264330447143

Status : Answered

Chosen Option : 1

Q.38 Which of the following is NOT subject to dissolution?

- Ans
- ☒ 1. Cabinet
  - ☒ 2. Legislative Assembly
  - ☒ 3. Legislative Council
  - ☒ 4. Council Of Ministers

Question ID : 264330173543

Option 1 ID : 264330680654

Option 2 ID : 264330680651

Option 3 ID : 264330680652

Option 4 ID : 264330680653

Status : Answered

Chosen Option : 3

Q.39 What is the name for the gestures used in Bharatnatyam?

- Ans ☒ 1. Laya  
☒ 2. Mudras  
☒ 3. Tripatakas  
☒ 4. Gatakas

Question ID : 264330110414  
 Option 1 ID : 264330433936  
 Option 2 ID : 264330433935  
 Option 3 ID : 264330433933  
 Option 4 ID : 264330433934  
 Status : Answered  
 Chosen Option : 2

Q.40 International Day of Non-violence is marked on which of the following freedom fighter's birth anniversary?

- Ans ☒ 1. Lal Bahadur Shastri  
☒ 2. BR Ambedkar  
☒ 3. Mahatma Gandhi  
☒ 4. Jawaharlal Nehru

Question ID : 264330106212  
 Option 1 ID : 264330417150  
 Option 2 ID : 264330417151  
 Option 3 ID : 264330417152  
 Option 4 ID : 264330417149  
 Status : Answered  
 Chosen Option : 3

Q.41 Which substance is fortified with calcium, Vitamin D and Vitamin B12?

- Ans ☒ 1. Eggs  
☒ 2. Cow's milk  
☒ 3. Dark green leafy vegetables  
☒ 4. Soy milk

Question ID : 264330134879  
 Option 1 ID : 264330528454  
 Option 2 ID : 264330528451  
 Option 3 ID : 264330528452  
 Option 4 ID : 264330528453  
 Status : Answered  
 Chosen Option : 2

Q.42 Uraiyur, a place famous for cotton, was the political centre (capital) of the:

- Ans ☒ 1. Chalukyas  
☒ 2. Cholas  
☒ 3. Pandyas  
☒ 4. Cheras

Question ID : 264330113570  
 Option 1 ID : 264330446366  
 Option 2 ID : 264330446368  
 Option 3 ID : 264330446365  
 Option 4 ID : 264330446367  
 Status : Not Answered  
 Chosen Option : --

**Q.43** A court poet of the Gupta period, Harishena, wrote a glowing account of the military exploits of his patron. Who was his patron?

- Ans
- ☒ 1. Chandragupta I
  - ☒ 2. Kumaragupta I
  - ☒ 3. Chandragupta II
  - ☒ 4. Samudragupta

Question ID : 264330171667  
 Option 1 ID : 264330673274  
 Option 2 ID : 264330673273  
 Option 3 ID : 264330673272  
 Option 4 ID : 264330673271  
 Status : Answered  
 Chosen Option : 3

**Q.44** Matthew Hayden, former Australian cricketer, has written which of the following autobiographies?

- Ans
- ☒ 1. At the Close Play
  - ☒ 2. Standing My Ground
  - ☒ 3. The Test of My Life
  - ☒ 4. Playing it My Way

Question ID : 26433055351  
 Option 1 ID : 264330216389  
 Option 2 ID : 264330216390  
 Option 3 ID : 264330216391  
 Option 4 ID : 264330216388  
 Status : Answered  
 Chosen Option : 1

**Q.45** Which Act of the Government of India ensures the 'right to work' from the following?

- Ans
- ☒ 1. The Employees' Provident Funds and Miscellaneous Provisions Act
  - ☒ 2. Citizenship Act
  - ☒ 3. Mahatma Gandhi National Rural Employment Guarantee Act
  - ☒ 4. Indian Institutes of Management Act

Question ID : 264330182977  
 Option 1 ID : 264330717640  
 Option 2 ID : 264330717642  
 Option 3 ID : 264330717643  
 Option 4 ID : 264330717641  
 Status : Answered  
 Chosen Option : 3

**Q.46** Which Article of the Constitution of India consists of the provision for the establishment of the Finance Commission?

- Ans
- ☒ 1. Article 280
  - ☒ 2. Article 250
  - ☒ 3. Article 270
  - ☒ 4. Article 260

Question ID : 264330110809  
 Option 1 ID : 264330435516  
 Option 2 ID : 264330435515  
 Option 3 ID : 264330435514  
 Option 4 ID : 264330435513  
 Status : Answered  
 Chosen Option : 1

Q.47 Which Governor General built the Victoria Memorial in Kolkata in 1905 in the memory of Queen Victoria of Britain?

- Ans
- ☒ 1. Lord Canning
  - ☒ 2. Lord Ripen
  - ☒ 3. Lord Curzon
  - ☒ 4. Lord Bentinck

Question ID : 26433074100  
Option 1 ID : 264330290521  
Option 2 ID : 264330290523  
Option 3 ID : 264330290520  
Option 4 ID : 264330290522  
Status : Answered  
Chosen Option : 3

Q.48 What was the approximate overall growth target in India's First Five-Year Plan?

- Ans
- ☒ 1. 1.3%
  - ☒ 2. 2.1%
  - ☒ 3. 4.2%
  - ☒ 4. 3.5%

Question ID : 264330131502  
Option 1 ID : 264330515111  
Option 2 ID : 264330515112  
Option 3 ID : 264330515114  
Option 4 ID : 264330515113  
Status : Answered  
Chosen Option : 2

Q.49 Select the correct statement.

- Ans
- ☒ 1. In the Southern peninsular region, the temperature difference is quite low between summers and winters.
  - ☒ 2. The climate of Gangetic plains is very stable throughout the year.
  - ☒ 3. In the Thar desert, the temperature difference is quite low between summers and winters.
  - ☒ 4. The climate of the Northern Himalaya region is very hot and humid.

Question ID : 264330131810  
Option 1 ID : 264330516341  
Option 2 ID : 264330516340  
Option 3 ID : 264330516339  
Option 4 ID : 264330516342  
Status : Answered  
Chosen Option : 1

Q.50 \_\_\_\_\_ originated in Kerala.

- Ans
- ☒ 1. Kuchipudi
  - ☒ 2. Kathakali
  - ☒ 3. Bharatnatyam
  - ☒ 4. Sattriya

Question ID : 264330106185  
Option 1 ID : 264330417041  
Option 2 ID : 264330417044  
Option 3 ID : 264330417042  
Option 4 ID : 264330417043  
Status : Answered  
Chosen Option : 2

Section : Reasoning

Q.1 Select the option that is related to the third word in the same way as the second word is related to the first word. (The words must be considered as meaningful English words and must NOT be related to each other based on the number of letters/number of consonants/vowels in the word)  
Notice : Ignore :: Expand:?

- Ans ☒ 1. Bulky  
☒ 2. Condense  
☒ 3. Gentle  
☒ 4. Sharp

Question ID : 26433069170  
Option 1 ID : 264330271192  
Option 2 ID : 264330271193  
Option 3 ID : 264330271194  
Option 4 ID : 264330271195  
Status : Answered  
Chosen Option : 2

Q.2 Which figure should replace the question mark (?) in the following series to continue the pattern?

T	U	S	U	T	7	K	7	T	7	K	S	
		K			S			U			T	?
6			7	K		6	6		S	U		6

Ans

☒ 1.

S	7	K
		U
6		T

☒ 2.

K	S	T
		7
6		U

☒ 3.

U	T	7
		K
6		S

☒ 4.

U	S	K
		7
6		T

Question ID : 264330129614  
Option 1 ID : 264330507823  
Option 2 ID : 264330507822  
Option 3 ID : 264330507824  
Option 4 ID : 264330507825  
Status : Answered  
Chosen Option : 4



Q.3 P, Q, R, S, T, U and V are sitting in a straight row, facing north. V sits at the immediate left of P. U sits at the immediate right of Q. Only R sits between S and T. Only two persons sit to the right of S. P is to the immediate left of T. Who among the following is at the extreme right end of the row?

- Ans
- ☒ 1. S
  - ☒ 2. T
  - ☒ 3. U
  - ☒ 4. V

Question ID : 26433087016  
Option 1 ID : 264330341708  
Option 2 ID : 264330341707  
Option 3 ID : 264330341706  
Option 4 ID : 264330341705  
Status : Answered  
Chosen Option : 3

Q.4 Read the given statements and conclusions carefully. Assuming that the information given in the statements is true, even if it appears to be at variance with commonly known facts, decide which of the given conclusions logically follow(s) from the statements.

Statements:

All mangoes are grapes.

All grapes are guavas.

Conclusions:

I. All guavas are grapes.

II. All grapes are mangoes.

- Ans
- ☒ 1. Only conclusion II follows
  - ☒ 2. Only conclusion I follows
  - ☒ 3. Both conclusions I and II follow
  - ☒ 4. Neither conclusion I nor II follows

Question ID : 26433069512  
Option 1 ID : 264330272561  
Option 2 ID : 264330272560  
Option 3 ID : 264330272562  
Option 4 ID : 264330272563  
Status : Answered  
Chosen Option : 4

Q.5 Select the number from among the given options that can replace the question mark (?) in the following series.

2, 9, 30, 93, 282, ?

- Ans
- ☒ 1. 343
  - ☒ 2. 423
  - ☒ 3. 849
  - ☒ 4. 467

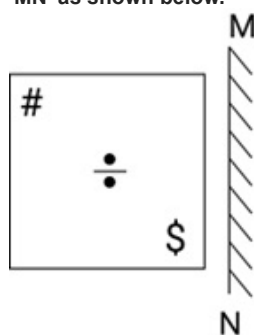
Question ID : 264330109760  
Option 1 ID : 264330431319  
Option 2 ID : 264330431317  
Option 3 ID : 264330431320  
Option 4 ID : 264330431318  
Status : Answered  
Chosen Option : 3

Q.6 Select the option that is related to the fourth term in the same way as the first term is related to the second term and the fifth term is related to the sixth term.  
 $11 : 343 :: ? : 125 :: 7 : 27$

- Ans
- ☒ 1. 10
  - ☒ 2. 11
  - ☒ 3. 13
  - ☒ 4. 9

Question ID : 26433059937  
 Option 1 ID : 264330234580  
 Option 2 ID : 264330234582  
 Option 3 ID : 264330234583  
 Option 4 ID : 264330234581  
 Status : Answered  
 Chosen Option : 4

Q.7 Select the correct mirror image of the given combination when the mirror is placed at 'MN' as shown below.

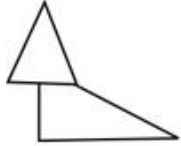


Ans

- ☒ 1.
- ☒ 2.
- ☒ 3.
- ☒ 4.

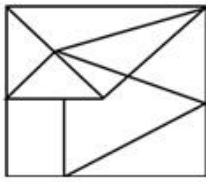
Question ID : 264330130768  
 Option 1 ID : 264330512184  
 Option 2 ID : 264330512183  
 Option 3 ID : 264330512186  
 Option 4 ID : 264330512185  
 Status : Answered  
 Chosen Option : 4

Q.8 Select the option in which the given figure is embedded (rotation is NOT allowed).

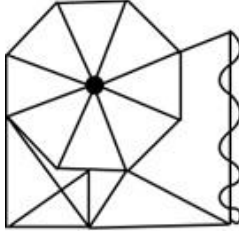


Ans

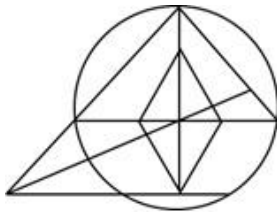
✗ 1.



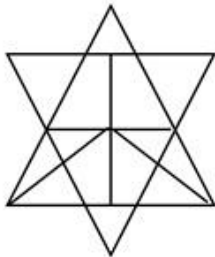
✓ 2.



✗ 3.



✗ 4.



Question ID : 264330114685

Option 1 ID : 264330450825

Option 2 ID : 264330450826

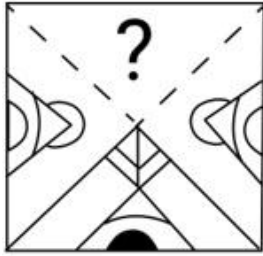
Option 3 ID : 264330450828

Option 4 ID : 264330450827

Status : Answered

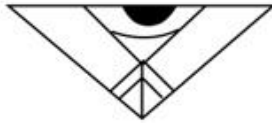
Chosen Option : 2

Q.9 Select the figure from the options that can replace the question mark (?) and complete the given pattern.

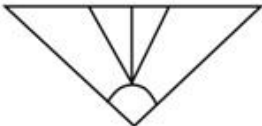


Ans

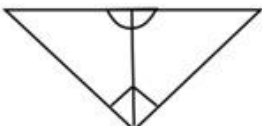
✓ 1.



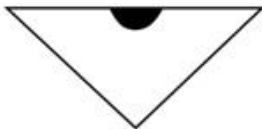
✗ 2.



✗ 3.



✗ 4.



Question ID : 264330106465

Option 1 ID : 264330418162

Option 2 ID : 264330418163

Option 3 ID : 264330418161

Option 4 ID : 264330418164

Status : Answered

Chosen Option : 1

Q.10 Which of the following terms will replace the question mark (?) in the given series?  
ZOJ, XMH, VKF, ?, RGB

Ans ✗ 1. TEP

✓ 2. TID

✗ 3. DIT

✗ 4. TED

Question ID : 26433091762

Option 1 ID : 264330360403

Option 2 ID : 264330360401

Option 3 ID : 264330360404

Option 4 ID : 264330360402

Status : Answered

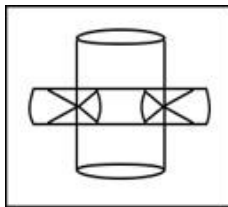
Chosen Option : 2

Q.11 Select the option in which the given figure is embedded (rotation is NOT allowed).

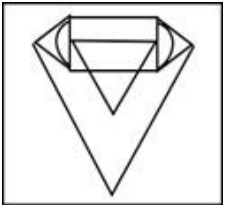


Ans

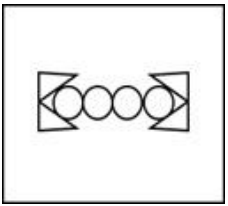
✓ 1.



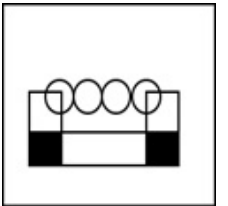
✗ 2.



✗ 3.



✗ 4.



Question ID : 264330116962

Option 1 ID : 264330459930

Option 2 ID : 264330459931

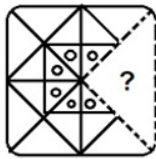
Option 3 ID : 264330459929

Option 4 ID : 264330459932

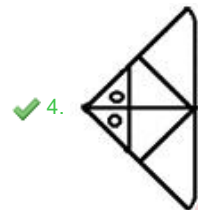
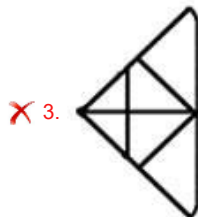
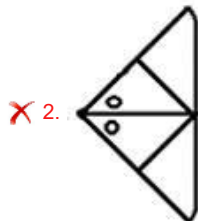
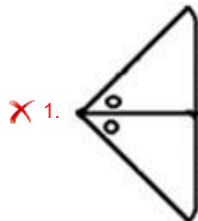
Status : Answered

Chosen Option : 2

Q.12 Select the option figure that will replace the question mark (?) in the figure given below to complete the pattern.



Ans



Question ID : 26433089465

Option 1 ID : 264330351364

Option 2 ID : 264330351363

Option 3 ID : 264330351362

Option 4 ID : 264330351361

Status : Answered

Chosen Option : 4

Q.13 Select the correct mirror image of the given combination when the mirror is placed at 'PQ' as shown below.

Z K 5 P V E | P  
Q

Ans

- ✗ 1. E V 9 2 K Z  
✗ 2. E 8 9 2 K Z  
✗ 3. E V 2 6 K Z  
✓ 4. E V 9 2 K Z

Question ID : 264330129816

Option 1 ID : 264330508495

Option 2 ID : 264330508497

Option 3 ID : 264330508496

Option 4 ID : 264330508498

Status : Answered

Chosen Option : 4

Q.14 Select the set in which the numbers are related in the same way as are the numbers of the following sets.

(NOTE : Operations should be performed on the whole numbers, without breaking down the numbers into its constituent digits. E.g. 13 – Operations on 13 such as adding /subtracting/multiplying etc. to 13 can be performed. Breaking down 13 into 1 and 3 and then performing mathematical operations on 1 and 3 is not allowed)

(12, 34, 5)

(3, 18, 6)

Ans ✗ 1. (2, 36, 4)

✓ 2. (2, 10, 3)

✗ 3. (4, 5, 1)

✗ 4. (4, 30, 2)

Question ID : 26433087044

Option 1 ID : 264330341818

Option 2 ID : 264330341820

Option 3 ID : 264330341819

Option 4 ID : 264330341817

Status : Answered

Chosen Option : 2

Q.15 Select the correct combination of mathematical signs that can sequentially replace the \* signs and balance the given equation.

$25 * 15 * 5 * 4 * 16 * 21$

Ans ✓ 1. +, ÷, ×, −, =

✗ 2. ÷, −, ×, +, =

✗ 3. +, ×, −, =, ÷

✗ 4. +, −, ×, ÷, =

Question ID : 26433079092

Option 1 ID : 264330310372

Option 2 ID : 264330310373

Option 3 ID : 264330310374

Option 4 ID : 264330310375

Status : Answered

Chosen Option : 1

Q.16 Which figure should replace the question mark (?) if the series were to be continued?

X	□	8	↑	
↑	8	Z	Z	X
	□		8	↑
			8	↑
			X	8
			X	8
			□	Z
				?

Ans

✓ 1.

Z				
↑	X	8		
				□

✗ 2.

X				
↑	8	Z		
				□

✗ 3.

Z				
□	↑	X		
				8

✗ 4.

Z				
□	X	8		
				↑

Question ID : 264330130820

Option 1 ID : 264330512393

Option 2 ID : 264330512392

Option 3 ID : 264330512394

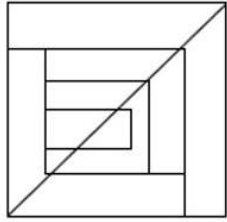
Option 4 ID : 264330512391

Status : Answered

Chosen Option : 1

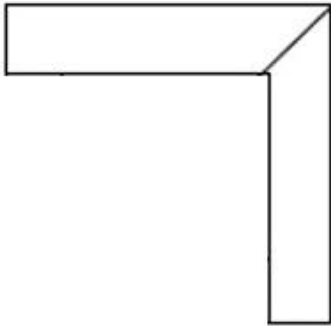


Q.17 Select the option figure which is embedded in the given figure. (Rotation is NOT allowed).



Ans

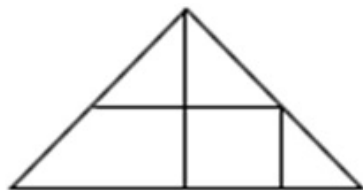
✓ 1.



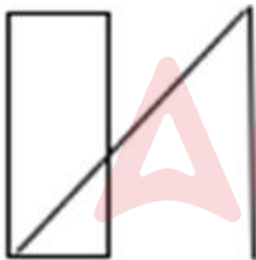
✗ 2.



✗ 3.



✗ 4.



Question ID : 26433085530

Option 1 ID : 264330335822

Option 2 ID : 264330335823

Option 3 ID : 264330335821

Option 4 ID : 264330335824

Status : Answered

Chosen Option : 1

Q.18 Which figure should replace the question mark (?) if the following series were to be continued?

L U X Z Y	U ♥ T ↑ Z	Z U ♥ T ↑	U Y P L T	T U Y P L	?
♥            ↑	L            Y Y	L            Z	↑            ↑	Z	

Ans

- ✓ 1.

U ↑ 3 Z P

T            L
- ✗ 2.

L T U Y P

Z            ↑
- ✗ 3.

L P U Y Z

T            ↑
- ✗ 4.

U ↑ Y Z P

T            L

Question ID : 264330103912  
Option 1 ID : 264330407950  
Option 2 ID : 264330407949  
Option 3 ID : 264330407951  
Option 4 ID : 264330407952  
Status : Answered  
Chosen Option : 1

Q.19 If 'A' denotes '+', 'B' denotes '×', 'C' denotes '−' and 'D' denotes '÷', then what will come in place of '?' in the following equation?  
(21 B 3) C 33 D ? = 60

- Ans
- ✗ 1. 30

✓ 2. 11

✗ 3. 3

✗ 4. 13

Question ID : 26433082476  
Option 1 ID : 264330323740  
Option 2 ID : 264330323738  
Option 3 ID : 264330323737  
Option 4 ID : 264330323739  
Status : Answered  
Chosen Option : 2

Q.20 Which of the following option figures will complete the pattern in the figure given below?



Ans

✗ 1.



✓ 2.



✗ 3.

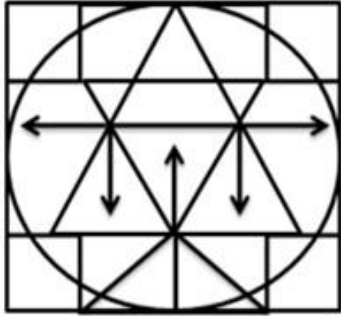


✗ 4.



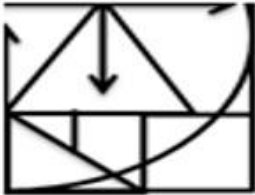
Question ID : 26433089623  
Option 1 ID : 264330351996  
Option 2 ID : 264330351993  
Option 3 ID : 264330351995  
Option 4 ID : 264330351994  
Status : Answered  
Chosen Option : 2

Q.21 Select the option figure that is embedded in the given figure. (Rotation is not allowed).

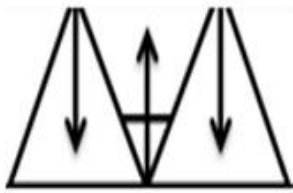


Ans

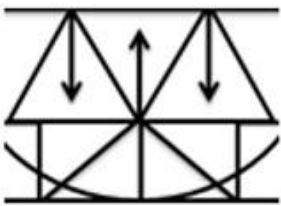
✗ 1.



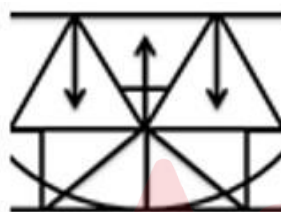
✗ 2.



✓ 3.



✗ 4.



Question ID : 264330114403

Option 1 ID : 264330449697

Option 2 ID : 264330449698

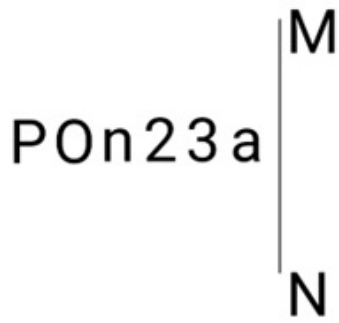
Option 3 ID : 264330449700

Option 4 ID : 264330449699

Status : Answered

Chosen Option : 3

Q.22 Select the correct mirror image of the given figure when the mirror is placed at MN as shown below.



Ans

- ✓ 1. 682n0P
- ✗ 2. 682n0P
- ✗ 3. 632n0P
- ✗ 4. 682n0P

Question ID : 264330126675

Option 1 ID : 264330496373

Option 2 ID : 264330496375

Option 3 ID : 264330496374

Option 4 ID : 264330496372

Status : Answered

Chosen Option : 1

Q.23 In a certain code language, 'CHILD' is written as '278113' and 'DRESS' is written as '31741818'. How will 'FIELD' be written in that language?

- ✗ 1. 686132
- ✗ 2. 573126
- ✓ 3. 584113
- ✗ 4. 695124

Question ID : 26433089411

Option 1 ID : 264330351148

Option 2 ID : 264330351145

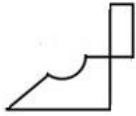
Option 3 ID : 264330351146

Option 4 ID : 264330351147

Status : Answered

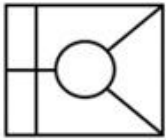
Chosen Option : 3

Q.24 Select the option in which the given figure is embedded (rotation is NOT allowed).

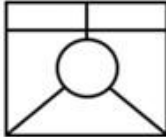


Ans

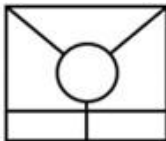
✗ 1.



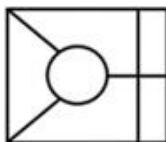
✗ 2.



✗ 3.



✓ 4.



Question ID : 264330101171

Option 1 ID : 264330397229

Option 2 ID : 264330397232

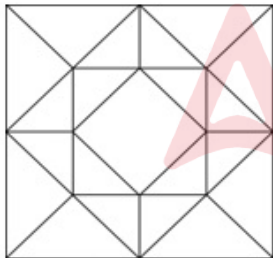
Option 3 ID : 264330397231

Option 4 ID : 264330397230

Status : Answered

Chosen Option : 4

Q.25 How many triangles are there in the given figure?



Ans

✗ 1. 30

✗ 2. 22

✓ 3. 28

✗ 4. 20

Question ID : 26433091711

Option 1 ID : 264330360212

Option 2 ID : 264330360210

Option 3 ID : 264330360211

Option 4 ID : 264330360209

Status : Answered

Chosen Option : 3

Q.1 The value of  $\frac{0.2 \times 0.2 \times 0.2 + 0.5 \times 0.5 \times 0.5}{0.02 \times 0.02 \times 0.02 + 0.05 \times 0.05 \times 0.05}$  is:

- Ans ☒ 1. 1000  
☒ 2. 10000  
☒ 3. 100  
☒ 4. 5000

Question ID : 264330106068  
Option 1 ID : 264330416574  
Option 2 ID : 264330416575  
Option 3 ID : 264330416573  
Option 4 ID : 264330416576  
Status : Answered  
Chosen Option : 1

Q.2 Find the greatest common divisor of 65, 75 and 90.

- Ans ☒ 1. 5  
☒ 2. 13  
☒ 3. 15  
☒ 4. 3

Question ID : 264330111426  
Option 1 ID : 264330437790  
Option 2 ID : 264330437791  
Option 3 ID : 264330437789  
Option 4 ID : 264330437792  
Status : Answered  
Chosen Option : 1

Q.3 The marked price of a commodity was ₹3,675. The seller offered a discount of 12% on its sale and incurred a loss of 2% as a consequence. What was the cost price (in ₹) of the commodity?

- Ans ☒ 1. 3275  
☒ 2. 3300  
☒ 3. 3280  
☒ 4. 3350

Question ID : 264330131160  
Option 1 ID : 264330513752  
Option 2 ID : 264330513754  
Option 3 ID : 264330513753  
Option 4 ID : 264330513751  
Status : Answered  
Chosen Option : 2

Q.4 A conical tent is required to accommodate 3 persons and each person needs  $45\text{ m}^2$  of space on the ground and  $300\text{ m}^3$  of air to breath. Find the vertical height of the tent (in m).

(Take  $\pi = \frac{22}{7}$ )

Ans ☒ 1. 20

☐ 2. 25

☐ 3. 18

☐ 4. 30

Question ID : 264330112436

Option 1 ID : 264330441831

Option 2 ID : 264330441830

Option 3 ID : 264330441829

Option 4 ID : 264330441832

Status : Answered

Chosen Option : 1

Q.5 If Basket A has 9 apples and 12 bananas, Basket B has 10 apples and 15 bananas, and Basket C has 8 apples and 16 bananas, then the ratios of apples and bananas in \_\_\_\_\_.

Ans ☐ 1. Basket A < Basket C

☐ 2. Basket A < Basket B

☐ 3. Basket A = Basket C

☒ 4. Basket A > Basket B

Question ID : 264330118078

Option 1 ID : 264330464130

Option 2 ID : 264330464128

Option 3 ID : 264330464129

Option 4 ID : 264330464127

Status : Answered

Chosen Option : 4

Q.6 In how much time (in years) will a sum of ₹3,125 become ₹3,515.20 at 8% per annum, compounded half-yearly?

Ans ☐ 1.  $2\frac{1}{2}$

☐ 2. 3

☒ 3.  $1\frac{1}{2}$

☐ 4. 2

Question ID : 264330103985

Option 1 ID : 264330408242

Option 2 ID : 264330408241

Option 3 ID : 264330408243

Option 4 ID : 264330408244

Status : Answered

Chosen Option : 3



Q.7 3 men and 4 women can do a work in 7 days, whereas 2 men and 1 woman can do it in 14 days. 7 women will complete the same work in:

- Ans ☒ 1. 8 days  
☒ 2. 10 days  
☒ 3. 12 days  
☒ 4. 9 days

Question ID : 264330103679

Option 1 ID : 264330407023

Option 2 ID : 264330407022

Option 3 ID : 264330407021

Option 4 ID : 264330407024

Status : Answered

Chosen Option : 2

Q.8 For reaching at a dance class, Neelam walks at 5 km/h and reaches late by 10 min. If she increases her speed by 1 km/h, then she reaches 15 min early. Find the distance she travelled from her house to her destination.

- Ans ☒ 1. 10.5 km  
☒ 2. 12.5 km  
☒ 3. 10 km  
☒ 4. 5.5 km

Question ID : 264330183863

Option 1 ID : 264330721128

Option 2 ID : 264330721129

Option 3 ID : 264330721130

Option 4 ID : 264330721131

Status : Answered

Chosen Option : 2

Q.9 If the cost price and selling price of an article are in the ratio of 13 : 17, then the percentage profit is:

- Ans ☒ 1.  $30\frac{7}{13}\%$   
☒ 2.  $30\frac{11}{13}\%$   
☒ 3.  $30\frac{8}{13}\%$   
☒ 4.  $30\frac{10}{13}\%$

Question ID : 264330104498

Option 1 ID : 264330410294

Option 2 ID : 264330410295

Option 3 ID : 264330410293

Option 4 ID : 264330410296

Status : Answered

Chosen Option : 4

**Q.10** In an election, there were two candidates Ram and Soham. The total number of voters in this constituency was 85800 and 80% of the total votes were polled. If 65% of the polled votes were cast in favour of Soham, how many votes were received by Ram?

- Ans
- ☒ 1. 38038
  - ☒ 2. 34034
  - ☒ 3. 26026
  - ☒ 4. 24024

Question ID : 264330130073

Option 1 ID : 264330509526

Option 2 ID : 264330509524

Option 3 ID : 264330509525

Option 4 ID : 264330509523

Status : Answered

Chosen Option : 4

**Q.11** Shashi sold her washing machine for ₹8,000; this was 60% increase in the value. What was the original price?

- Ans
- ☒ 1. ₹6,200
  - ☒ 2. ₹5,000
  - ☒ 3. ₹5,800
  - ☒ 4. ₹5,400

Question ID : 264330103608

Option 1 ID : 264330406740

Option 2 ID : 264330406737

Option 3 ID : 264330406739

Option 4 ID : 264330406738

Status : Answered

Chosen Option : 2

**Q.12** Find the average of all prime numbers between 15 and 30.

- Ans
- ☒ 1. 23
  - ☒ 2. 25
  - ☒ 3. 24
  - ☒ 4. 22

Question ID : 264330130908

Option 1 ID : 264330512744

Option 2 ID : 264330512745

Option 3 ID : 264330512743

Option 4 ID : 264330512746

Status : Answered

Chosen Option : 4

Q.13 Two banks, A and B, offered loans at rates 5.5% and 6.5% per annum, respectively. Ramesh borrowed an amount of ₹3,00,000 from each bank. The positive difference between the amounts of simple interest paid to the two banks by Ramesh after 2 years will be:

- Ans
- ☒ 1. ₹2,000
  - ☒ 2. ₹4,000
  - ☒ 3. ₹8,000
  - ☒ 4. ₹6,000

Question ID : 264330182523

Option 1 ID : 264330715885

Option 2 ID : 264330715886

Option 3 ID : 264330715883

Option 4 ID : 264330715884

Status : Answered

Chosen Option : 4

Q.14 Simplify  $\left[\left(2\frac{5}{13}\right)\% \text{ of } 9100 + \left(1\frac{1}{17}\right)\% \text{ of } 10200 + \frac{3}{5}(17 + 13)\right]^{\frac{1}{3}}$ .

- Ans
- ☒ 1. 14
  - ☒ 2. 9
  - ☒ 3. 7
  - ☒ 4. 11

Question ID : 264330103687

Option 1 ID : 264330407055

Option 2 ID : 264330407056

Option 3 ID : 264330407054

Option 4 ID : 264330407053

Status : Answered

Chosen Option : 3

Q.15 Find the area (in  $\text{cm}^2$ ) of the triangle whose height is 48 cm and the base is  $\frac{1}{6}$  the length of the height?

- Ans
- ☒ 1. 190
  - ☒ 2. 174
  - ☒ 3. 192
  - ☒ 4. 188

Question ID : 264330129454

Option 1 ID : 264330507185

Option 2 ID : 264330507184

Option 3 ID : 264330507182

Option 4 ID : 264330507183

Status : Answered

Chosen Option : 3

Q.1 In Microsoft Excel 365, which of the following is NOT done by Conditional Formatting?

- Ans ☒ 1. We can set condition to look for bold and apply italics on them.
- ☒ 2. We can delete condition if it is not required.
- ☒ 3. We can apply font border and pattern formats that meet the specified conditions.
- ☒ 4. We can add more than one condition to format.

Question ID : 264330182059

Option 1 ID : 264330714076

Option 2 ID : 264330714077

Option 3 ID : 264330714078

Option 4 ID : 264330714075

Status : Answered

Chosen Option : 1

Q.2 Which of the following folders has an unsolicited and unwanted junk email sent out in bulk to an indiscriminate recipient list?

- Ans ☒ 1. Spam folder
- ☒ 2. Outbox
- ☒ 3. Inbox
- ☒ 4. Draft

Question ID : 264330178587

Option 1 ID : 264330700377

Option 2 ID : 264330700378

Option 3 ID : 264330700375

Option 4 ID : 264330700376

Status : Answered

Chosen Option : 1

Q.3 Which of the following keyboard shortcuts is used to apply bullets in MS Word 365?

- Ans ☒ 1. Ctrl + Shift + I
- ☒ 2. Ctrl + Shift + B
- ☒ 3. Ctrl + Shift + L
- ☒ 4. Ctrl + Shift + C

Question ID : 264330180831

Option 1 ID : 264330709288

Option 2 ID : 264330709289

Option 3 ID : 264330709287

Option 4 ID : 264330709290

Status : Answered

Chosen Option : 3

Q.4 In MS word 365 What does the 'Header' section in the 'Page Setup' dialog box allow you to do?

- Ans ☒ 1. Change the page orientation
- ☒ 2. Adjust the page margins
- ☒ 3. Add a header with text or page numbers to the top of each page
- ☒ 4. Change the line spacing of the document

Question ID : 264330180846

Option 1 ID : 264330709349

Option 2 ID : 264330709347

Option 3 ID : 264330709348

Option 4 ID : 264330709350

Status : Answered

Chosen Option : 3

Q.5 Which function is used to display the current date in MS-excel 365?

- Ans ☒ 1. DATE()  
☒ 2. TODAY()  
☒ 3. MONTH()  
☒ 4. DAY()

Question ID : 264330176689  
 Option 1 ID : 264330692972  
 Option 2 ID : 264330692971  
 Option 3 ID : 264330692974  
 Option 4 ID : 264330692973  
 Status : Answered  
 Chosen Option : 1

Q.6 What does the 'Grammar' check in Microsoft Word 365 primarily focus on?

- I. Spelling errors  
 II. Sentence structure and syntax

- Ans ☒ 1. Neither I nor II  
☒ 2. Only II  
☒ 3. Both I and II  
☒ 4. Only I

Question ID : 264330180715  
 Option 1 ID : 264330708830  
 Option 2 ID : 264330708828  
 Option 3 ID : 264330708829  
 Option 4 ID : 264330708827  
 Status : Answered  
 Chosen Option : 4

Q.7 In MS Excel 365, The basic syntax or symbol required to execute a function in MS-Excel is:

- Ans ☒ 1. \$  
☒ 2. =  
☒ 3. :  
☒ 4. +

Question ID : 264330175955  
 Option 1 ID : 264330690118  
 Option 2 ID : 264330690116  
 Option 3 ID : 264330690117  
 Option 4 ID : 264330690115  
 Status : Answered  
 Chosen Option : 2

Q.8 The shortcut key used to save the document in MS-Word 365 is:

- Ans ☒ 1. Ctrl + S  
☒ 2. Ctrl + A  
☒ 3. Ctrl + X  
☒ 4. Ctrl + V

Question ID : 264330175980  
 Option 1 ID : 264330690216  
 Option 2 ID : 264330690217  
 Option 3 ID : 264330690218  
 Option 4 ID : 264330690215  
 Status : Answered  
 Chosen Option : 1

**Q.9 Which of the following protocols is commonly used for sending and receiving emails between servers?**

- Ans**
- ☐ 1. Hyper Text Transfer Protocol (HTTP)
  - ☐ 2. Transmission Control Protocol (TCP)
  - ☒ 3. Simple Mail Transfer Protocol (SMTP)
  - ☐ 4. File Transfer Protocol (FTP)

Question ID : **264330180806**

Option 1 ID : **264330709189**

Option 2 ID : **264330709190**

Option 3 ID : **264330709188**

Option 4 ID : **264330709187**

Status : **Answered**

Chosen Option : **4**

**Q.10 Which of the following shortcut keys can be used to 'align right' the selected text in MS-Word 365?**

- Ans**
- ☐ 1. Ctrl + U
  - ☒ 2. Ctrl + R
  - ☐ 3. Ctrl + E
  - ☐ 4. Ctrl + J

Question ID : **264330175981**

Option 1 ID : **264330690221**

Option 2 ID : **264330690222**

Option 3 ID : **264330690219**

Option 4 ID : **264330690220**

Status : **Answered**

Chosen Option : **2**