

Constable Executive Male and Female in Delhi Police Examination 2023

Roll Number	
Candidate Name	
Venue Name	
Exam Date	02/12/2023
Exam Time	12:00 PM - 1:30 PM
Subject	Constable Executive Male and Female in Delhi Police Examination 2023

Section : General Knowledge

Q.1 Read the below statements and select the correct option with respect to self-help groups.

- (i) A self-help group is a registered group of micro-entrepreneurs.
(ii) The micro-entrepreneurs of self-help groups have similar social and economic backgrounds.

- Ans**
- ☒ 1. Both (i) and (ii) are true
 - ☒ 2. Both (i) and (ii) are false
 - ☒ 3. Only (ii) is true
 - ☒ 4. Only (i) is true

Question ID : 264330118239

Option 1 ID : 264330464773

Option 2 ID : 264330464774

Option 3 ID : 264330464772

Option 4 ID : 264330464771

Status : Answered

Chosen Option : 4

Q.2 Ranjeet Singh belonged to which Misal of the Sikh community?

- Ans**
- ☒ 1. Bhangi
 - ☒ 2. Ahluwalia
 - ☒ 3. Kanhaiya
 - ☒ 4. Sukarchakia

Question ID : 264330118006

Option 1 ID : 264330463841

Option 2 ID : 264330463839

Option 3 ID : 264330463842

Option 4 ID : 264330463840

Status : Answered

Chosen Option : 4

Test Prime

**ALL EXAMS,
ONE SUBSCRIPTION**



70,000+
Mock Tests



**Personalised
Report Card**



**Unlimited
Re-Attempt**



600+
Exam Covered



**Previous Year
Papers**



**500%
Refund**



ATTEMPT FREE MOCK NOW

Q.3 In which of the following years did young leaders in Satara in Maharashtra set up a parallel government Parti Sarkar that ran People's court and organised constructive work?

- Ans ☒ 1. 1943
☒ 2. 1934
☒ 3. 1918
☒ 4. 1904

Question ID : 264330119015

Option 1 ID : 264330466715

Option 2 ID : 264330466716

Option 3 ID : 264330466717

Option 4 ID : 264330466718

Status : Not Attempted and
Marked For Review

Chosen Option : --

Q.4 Ramchandra Manjhi, Padma Shri 2021 awardee, was conferred the award for which of the following contributions to art?

- Ans ☒ 1. Playing and folk singing of tribal Kinneras
☒ 2. Conserving ancient Carnatic musical instruments
☒ 3. Carrying forward the legacy of Gramin Natak and folk dancing
☒ 4. Adapting the clarinet to Carnatic music

Question ID : 26433071516

Option 1 ID : 264330280489

Option 2 ID : 264330280488

Option 3 ID : 264330280491

Option 4 ID : 264330280490

Status : Answered

Chosen Option : 3

Q.5 Who among the following rulers strengthened the Satavahana empire in the Deccan in ancient India?

- Ans ☒ 1. Simuka
☒ 2. Shiva Skanda Satakarni
☒ 3. Yajna Sri Satakarni
☒ 4. Gautamiputra Satakarni

Question ID : 264330120242

Option 1 ID : 264330471223

Option 2 ID : 264330471224

Option 3 ID : 264330471225

Option 4 ID : 264330471226

Status : Answered

Chosen Option : 4

Q.6 For which of the following dance forms was Kamalini Asthana awarded the Padma Shri in 2022?

- Ans
- ☐ 1. Odissi
 - ☐ 2. Kuchipudi
 - ☒ 3. Kathak
 - ☐ 4. Sattriya

Question ID : 264330111971
 Option 1 ID : 264330439970
 Option 2 ID : 264330439969
 Option 3 ID : 264330439972
 Option 4 ID : 264330439971
 Status : Answered
 Chosen Option : 3

Q.7 The Cholas as a ruling power rose to eminence in the 9th century CE when _____ seized Tanjavur from a feudatory chief of the Pallavas called Muttarayas.

- Ans
- ☐ 1. Parantaka I
 - ☐ 2. Rajaraja Chola I
 - ☒ 3. Vijayalaya
 - ☐ 4. Uttama Chola

Question ID : 264330119760
 Option 1 ID : 264330469315
 Option 2 ID : 264330469317
 Option 3 ID : 264330469316
 Option 4 ID : 264330469318
 Status : Answered
 Chosen Option : 3

Q.8 'The Race of My Life: An Autobiography' is written by which Indian athlete?

- Ans
- ☐ 1. Shivnath Singh
 - ☐ 2. PT Usha
 - ☒ 3. Milkha Singh
 - ☐ 4. Hima Das

Question ID : 26433092393
 Option 1 ID : 264330362864
 Option 2 ID : 264330362862
 Option 3 ID : 264330362863
 Option 4 ID : 264330362861
 Status : Answered
 Chosen Option : 3

Q.9 Taxes levied on commodities are known as which types of taxes?

- Ans
- ☐ 1. Corporation taxes
 - ☐ 2. Direct taxes
 - ☒ 3. Indirect taxes
 - ☐ 4. Both direct and indirect taxes

Question ID : 264330111608
 Option 1 ID : 264330438518
 Option 2 ID : 264330438517
 Option 3 ID : 264330438519
 Option 4 ID : 264330438520
 Status : Answered
 Chosen Option : 3

Q.10 Which Article of the Constitution of India declares the Supreme Court to be a court of record?

- Ans**
- ☒ 1. Article 126
 - ☒ 2. Article 128
 - ☒ 3. Article 125
 - ☒ 4. Article 129

Question ID : 264330177761
 Option 1 ID : 264330697152
 Option 2 ID : 264330697153
 Option 3 ID : 264330697151
 Option 4 ID : 264330697154
 Status : Answered
 Chosen Option : 4

Q.11 Fort of Kushalgadh is located in which Indian state?

- Ans**
- ☒ 1. Chhattisgarh
 - ☒ 2. Maharashtra
 - ☒ 3. Madhya Pradesh
 - ☒ 4. Uttar Pradesh

Question ID : 264330109650
 Option 1 ID : 264330430879
 Option 2 ID : 264330430880
 Option 3 ID : 264330430878
 Option 4 ID : 264330430877
 Status : Answered
 Chosen Option : 3

Q.12 The Gopurams of the Chidambaram temple contain many poses of which dance form?

- Ans**
- ☒ 1. Kathakali
 - ☒ 2. Oddisi
 - ☒ 3. Bharatnatyam
 - ☒ 4. Kuchipudi

Question ID : 264330110413
 Option 1 ID : 264330433931
 Option 2 ID : 264330433930
 Option 3 ID : 264330433932
 Option 4 ID : 264330433929
 Status : Answered
 Chosen Option : 3

Q.13 Which of the following statements is INCORRECT with regard to microfinance?

- Ans**
- ☒ 1. Microfinance in India evolved to fill the gaps created by the formal banking institutions.
 - ☒ 2. Microfinance initiative in India was taken by NABARD.
 - ☒ 3. Microfinancing started in India majorly due the nationalisation of banks.
 - ☒ 4. The Reserve Bank of India had appointed the Malegam Committee to go into the regulation of microfinance institutions

Question ID : 264330112455
 Option 1 ID : 264330441906
 Option 2 ID : 264330441907
 Option 3 ID : 264330441908
 Option 4 ID : 264330441905
 Status : Answered
 Chosen Option : 3

Q.14 Against which oppressive law did Mahatma Gandhi launch a movement in 1919 that made him a truly national leader?

- Ans**
- ☐ 1. Morley Minto Reforms
 - ☐ 2. Salt Tax
 - ☐ 3. Vernacular Press Act
 - ☒ 4. Rowlatt Act

Question ID : 264330118991
 Option 1 ID : 264330466620
 Option 2 ID : 264330466621
 Option 3 ID : 264330466622
 Option 4 ID : 264330466619
 Status : Answered
 Chosen Option : 4

Q.15 In the initial years of independence, the state had complete control of those industries that were:

- Ans**
- ☒ 1. vital for the economy
 - ☐ 2. inconsequential to the economy
 - ☐ 3. only complementary to the policies of the private sector
 - ☐ 4. not profitable by design

Question ID : 264330117749
 Option 1 ID : 264330462811
 Option 2 ID : 264330462812
 Option 3 ID : 264330462813
 Option 4 ID : 264330462814
 Status : Answered
 Chosen Option : 1

Q.16 'Lai Haraoba' is a style of which of the following Classical dances of India?

- Ans**
- ☐ 1. Kathakali
 - ☐ 2. Kathak
 - ☒ 3. Manipuri
 - ☐ 4. Odissi

Question ID : 264330114462
 Option 1 ID : 264330449936
 Option 2 ID : 264330449935
 Option 3 ID : 264330449934
 Option 4 ID : 264330449933
 Status : Answered
 Chosen Option : 3

Q.17 The Federal Structure, Judiciary, Governor System and Emergency Powers — these features of the Indian Constitution are drawn from the:_____

- Ans**
- ☐ 1. Government of India Act of 1909
 - ☐ 2. Indian Independence Act of 1947
 - ☐ 3. Government of India Act of 1919
 - ☒ 4. Government of India Act of 1935

Question ID : 264330114743
 Option 1 ID : 264330451057
 Option 2 ID : 264330451060
 Option 3 ID : 264330451058
 Option 4 ID : 264330451059
 Status : Answered
 Chosen Option : 4

Q.18 When is the Maru Mahotsava at Jaiselmer held?

- Ans
- ☒ 1. March-April
 - ☒ 2. September-October
 - ☒ 3. November-December
 - ☒ 4. January-February

Question ID : 264330130874
 Option 1 ID : 264330512608
 Option 2 ID : 264330512609
 Option 3 ID : 264330512610
 Option 4 ID : 264330512607
 Status : Not Answered
 Chosen Option : --

Q.19 By which of the following authors was the English novel 'Jude the Obscure' written?

- Ans
- ☒ 1. Jane Austen
 - ☒ 2. Arthur Conan Doyle
 - ☒ 3. Charlotte Bronte
 - ☒ 4. Thomas Hardy

Question ID : 26433066681
 Option 1 ID : 264330261249
 Option 2 ID : 264330261248
 Option 3 ID : 264330261250
 Option 4 ID : 264330261251
 Status : Not Answered
 Chosen Option : --

Q.20 The first ICC Men's T20 Cricket World Cup was won by _____.

- Ans
- ☒ 1. West Indies
 - ☒ 2. India
 - ☒ 3. England
 - ☒ 4. Australia

Question ID : 264330130624
 Option 1 ID : 264330511609
 Option 2 ID : 264330511608
 Option 3 ID : 264330511607
 Option 4 ID : 264330511610
 Status : Answered
 Chosen Option : 2

Q.21 Which of the following is NOT a 'Navratna' or 'Maharatna' company in India?

- Ans
- ☒ 1. National Thermal Power Corporation
 - ☒ 2. Industrial Finance Corporation of India
 - ☒ 3. Indian Oil Corporation
 - ☒ 4. Oil & Natural Gas Corporation

Question ID : 264330109135
 Option 1 ID : 264330428819
 Option 2 ID : 264330428820
 Option 3 ID : 264330428817
 Option 4 ID : 264330428818
 Status : Answered
 Chosen Option : 2

Q.22 How many industries have been reserved for the public sector under the Industrial Policy Resolution, 1956?

Ans ☒ 1. 17

☐ 2. 21

☐ 3. 2

☐ 4. 15

Question ID : 264330110175

Option 1 ID : 264330432979

Option 2 ID : 264330432980

Option 3 ID : 264330432977

Option 4 ID : 264330432978

Status : Not Attempted and
Marked For Review

Chosen Option : --

Q.23 Which of the following state High Court's jurisdiction extends to the Union Territories of Daman and Diu?

Ans ☐ 1. Guwahati High Court

☒ 2. Bombay High Court

☐ 3. Kerala High Court

☐ 4. Calcutta High Court

Question ID : 26433086841

Option 1 ID : 264330341005

Option 2 ID : 264330341006

Option 3 ID : 264330341007

Option 4 ID : 264330341008

Status : Answered

Chosen Option : 2

Q.24 Which of the following states showed highest levels of poverty, in the 2011 census?

Ans ☐ 1. Uttar Pradesh

☒ 2. Bihar

☐ 3. Maharashtra

☐ 4. Karnataka

Question ID : 264330120339

Option 1 ID : 264330471608

Option 2 ID : 264330471609

Option 3 ID : 264330471607

Option 4 ID : 264330471610

Status : Answered

Chosen Option : 2

Q.25 Budhaditya Mukharjee, Vilayat Khan and Mustaq Ali Khan are associated with which musical instrument?

- Ans
- ☒ 1. Surbahar
 - ☒ 2. Sarod
 - ☒ 3. Santoor
 - ☒ 4. Sitar

Question ID : 264330111190
 Option 1 ID : 264330436848
 Option 2 ID : 264330436845
 Option 3 ID : 264330436847
 Option 4 ID : 264330436846
 Status : Answered
 Chosen Option : 4

Q.26 Terrace farming is commonly practiced in which of the following regions of India?

- Ans
- ☒ 1. Himalayan region
 - ☒ 2. Thar Desert
 - ☒ 3. Gangetic Plains
 - ☒ 4. Coastal Plain

Question ID : 264330183061
 Option 1 ID : 264330717976
 Option 2 ID : 264330717978
 Option 3 ID : 264330717977
 Option 4 ID : 264330717979
 Status : Answered
 Chosen Option : 1

Q.27 In archery, what is the maximum time permitted to shoot an end of three arrows?

- Ans
- ☒ 1. 2 minutes
 - ☒ 2. 5 minutes
 - ☒ 3. 8 minutes
 - ☒ 4. 7 minutes

Question ID : 264330113775
 Option 1 ID : 264330447185
 Option 2 ID : 264330447186
 Option 3 ID : 264330447188
 Option 4 ID : 264330447187
 Status : Not Attempted and Marked For Review
 Chosen Option : --

Q.28 Name a genus of widely distributed floating aquatic plants that is the smallest monocot plant known to date and has the highest total protein content.

- Ans
- ☒ 1. Azolla
 - ☒ 2. Pistia
 - ☒ 3. Wolffia
 - ☒ 4. Water Hyacinth

Question ID : 26433055779
 Option 1 ID : 264330218100
 Option 2 ID : 264330218102
 Option 3 ID : 264330218103
 Option 4 ID : 264330218101
 Status : Not Answered
 Chosen Option : --

Q.29 What is the common biological phenomenon by which one organism produces biochemicals that influence the growth, survival, development, and reproduction of other organisms known as?

- Ans
- ☒ 1. Allotropy
 - ☒ 2. Allopathy
 - ☒ 3. Allelopathy
 - ☒ 4. Allelomorph

Question ID : 264330120960

Option 1 ID : 264330474055

Option 2 ID : 264330474056

Option 3 ID : 264330474058

Option 4 ID : 264330474057

Status : Not Attempted and
Marked For Review

Chosen Option : --

Q.30 What is/are known as enzymes?

- Ans
- ☒ 1. Biological catalysts
 - ☒ 2. Physical activity
 - ☒ 3. Substrates
 - ☒ 4. Receptors

Question ID : 264330113341

Option 1 ID : 264330445450

Option 2 ID : 264330445452

Option 3 ID : 264330445451

Option 4 ID : 264330445449

Status : Answered

Chosen Option : 1

Q.31 'West Meets East' is an album by American violinist Yehudi Menuhin and Indian sitar virtuoso _____.

- Ans
- ☒ 1. Shahed Parvez
 - ☒ 2. Prem Joshua
 - ☒ 3. Vilayat Khan
 - ☒ 4. Ravi Shankar

Question ID : 264330113243

Option 1 ID : 264330445059

Option 2 ID : 264330445060

Option 3 ID : 264330445057

Option 4 ID : 264330445058

Status : Answered

Chosen Option : 4

Q.32 The 97th Constitutional Amendment Act of 2011 has added a new Directive Principle of State Policy related to:

- Ans
- ☒ 1. Maternity Leave
 - ☒ 2. Child Labour
 - ☒ 3. Environment
 - ☒ 4. Cooperative Societies

Question ID : 264330114765

Option 1 ID : 264330451146

Option 2 ID : 264330451145

Option 3 ID : 264330451147

Option 4 ID : 264330451148

Status : Not Attempted and
Marked For Review

Chosen Option : --

Q.33 Which of the following Articles of the Indian Constitution deals with fundamental duties?

- Ans
- ☒ 1. Article 41A
 - ☒ 2. Article 41
 - ☒ 3. Article 51A
 - ☒ 4. Article 71

Question ID : 264330113383

Option 1 ID : 264330445618

Option 2 ID : 264330445617

Option 3 ID : 264330445619

Option 4 ID : 264330445620

Status : Answered

Chosen Option : 3

Q.34 According to the census of India 2011, identify the state in which 'Total Literacy Rate' and 'Male Literacy Rate' both were more than 90%?

- Ans
- ☒ 1. Himachal Pradesh
 - ☒ 2. Goa
 - ☒ 3. Mizoram
 - ☒ 4. Tripura

Question ID : 264330120336

Option 1 ID : 264330471598

Option 2 ID : 264330471596

Option 3 ID : 264330471595

Option 4 ID : 264330471597

Status : Answered

Chosen Option : 3

Q.35 Which of the following is the most reactive metal?

- Ans ☒ 1. Lead
☒ 2. Magnesium
☒ 3. Zinc
☒ 4. Mercury

Question ID : 264330173654
Option 1 ID : 264330681096
Option 2 ID : 264330681098
Option 3 ID : 264330681097
Option 4 ID : 264330681095
Status : Answered
Chosen Option : 2

Q.36 In which year did India and Maldives sign a trade agreement which provides for export of vital commodities?

- Ans ☒ 1. 1981
☒ 2. 2003
☒ 3. 1984
☒ 4. 2001

Question ID : 264330130607
Option 1 ID : 264330511540
Option 2 ID : 264330511542
Option 3 ID : 264330511539
Option 4 ID : 264330511541
Status : Not Answered
Chosen Option : --

Q.37 _____ members of the State Legislative Council are nominated by the Governor of the State.

- Ans ☒ 1. 1/6
☒ 2. 1/12
☒ 3. 1/9
☒ 4. 1/15

Question ID : 264330120196
Option 1 ID : 264330471039
Option 2 ID : 264330471040
Option 3 ID : 264330471042
Option 4 ID : 264330471041
Status : Answered
Chosen Option : 1

Q.38 The first edition of the Khelo India University Games was hosted in which of the following years?

- Ans ☒ 1. 2019
☒ 2. 2021
☒ 3. 2020
☒ 4. 2018

Question ID : 264330176944
Option 1 ID : 264330693972
Option 2 ID : 264330693974
Option 3 ID : 264330693973
Option 4 ID : 264330693971
Status : Answered
Chosen Option : 2

Q.39 Under the Liberalisation Policy, a lot of industries were reserved for the public sector. Which of the following industries are still reserved under public sector?

- Ans** ☒ 1. Atomic and Railway Operations
☒ 2. Coal and Mineral Oils
☒ 3. Copper and zinc
☒ 4. Hazardous Chemicals and Alcohol

Question ID : 264330111602
 Option 1 ID : 264330438493
 Option 2 ID : 264330438495
 Option 3 ID : 264330438496
 Option 4 ID : 264330438494
 Status : Answered
 Chosen Option : 1

Q.40 From which country is the power of judicial review taken in the Indian Constitution?

- Ans** ☒ 1. United Kingdom
☒ 2. United States of America
☒ 3. France
☒ 4. Japan

Question ID : 264330183142
 Option 1 ID : 264330718302
 Option 2 ID : 264330718303
 Option 3 ID : 264330718301
 Option 4 ID : 264330718300
 Status : Answered
 Chosen Option : 2

Q.41 Which of the following is a watershed development scheme of the Ministry of Rural Development of India?

- Ans** ☒ 1. Hariyali
☒ 2. Digging hand-pump wells
☒ 3. Dam construction
☒ 4. Khushali

Question ID : 264330131820
 Option 1 ID : 264330516379
 Option 2 ID : 264330516382
 Option 3 ID : 264330516381
 Option 4 ID : 264330516380
 Status : Not Answered
 Chosen Option : --

Q.42 On the first Republic Day, 26 January 1950, the Constitution of India replaced which British Act?

- Ans** ☒ 1. Government of India Act (1919)
☒ 2. Government of India Act (1858)
☒ 3. Government of India Act (1930)
☒ 4. Government of India Act (1935)

Question ID : 264330110458
 Option 1 ID : 264330434111
 Option 2 ID : 264330434109
 Option 3 ID : 264330434112
 Option 4 ID : 264330434110
 Status : Answered
 Chosen Option : 4

Q.43 In which Indian state is the cave site of Bagh located?

- Ans ☒ 1. Maharashtra
☒ 2. Odisha
☒ 3. Madhya Pradesh
☒ 4. Uttar Pradesh

Question ID : 264330109632
Option 1 ID : 264330430808
Option 2 ID : 264330430807
Option 3 ID : 264330430806
Option 4 ID : 264330430805
Status : Answered
Chosen Option : 3

Q.44 Surya Sen was associated with which of the following radical activities against British?

- Ans ☒ 1. Kakori Conspiracy
☒ 2. Muzaffarpur Conspiracy Case
☒ 3. Delhi Conspiracy Case
☒ 4. Chittagong Armory Raid

Question ID : 264330183103
Option 1 ID : 264330718144
Option 2 ID : 264330718145
Option 3 ID : 264330718147
Option 4 ID : 264330718146
Status : Answered
Chosen Option : 4

Q.45 As per the Indus Water Treaty 1960, how much per cent water can India use from the river?

- Ans ☒ 1. 25
☒ 2. 22
☒ 3. 20
☒ 4. 28

Question ID : 264330177104
Option 1 ID : 264330694611
Option 2 ID : 264330694613
Option 3 ID : 264330694612
Option 4 ID : 264330694614
Status : Not Answered
Chosen Option : --

Q.46 Which dynasty ruled after the Tuglaq dynasty?

- Ans ☒ 1. Lodi dynasty
☒ 2. Sayyid dynasty
☒ 3. Khalji dynasty
☒ 4. Mamluk dynasty

Question ID : 264330166882
Option 1 ID : 264330654565
Option 2 ID : 264330654563
Option 3 ID : 264330654564
Option 4 ID : 264330654566
Status : Answered
Chosen Option : 2

Q.47 In Olympic archery events, how many concentric rings are there which represent different scoring sectors?

- Ans
- ☒ 1. 7
 - ☒ 2. 5
 - ☒ 3. 2
 - ☒ 4. 10

Question ID : 264330113774
Option 1 ID : 264330447183
Option 2 ID : 264330447182
Option 3 ID : 264330447184
Option 4 ID : 264330447181
Status : Answered
Chosen Option : 2

Q.48 Which elements act as hygroscopic nuclei around which water vapour condenses to produce clouds?

- Ans
- ☒ 1. Water and dust
 - ☒ 2. Salt and water
 - ☒ 3. Dust and rock
 - ☒ 4. Dust and sea salt

Question ID : 264330118513
Option 1 ID : 264330465455
Option 2 ID : 264330465453
Option 3 ID : 264330465456
Option 4 ID : 264330465454
Status : Not Answered
Chosen Option : --

Q.49 The first electric train ran in which state of India in the year 1925?

- Ans
- ☒ 1. Haryana
 - ☒ 2. Rajasthan
 - ☒ 3. West Bengal
 - ☒ 4. Maharashtra

Question ID : 264330181470
Option 1 ID : 264330711805
Option 2 ID : 264330711804
Option 3 ID : 264330711806
Option 4 ID : 264330711803
Status : Answered
Chosen Option : 4

Q.50 Initially, which of the following was the capital of Magadha Mahajanapada?


- Ans
- ☒ 1. Rajagaha
 - ☒ 2. Vikramshila
 - ☒ 3. Pataliputra
 - ☒ 4. Vaishali


Question ID : 264330118948
Option 1 ID : 264330466448
Option 2 ID : 264330466449
Option 3 ID : 264330466447
Option 4 ID : 264330466450
Status : Answered
Chosen Option : 3

Section : Reasoning

Q.1 Select the correct combination of mathematical signs that can sequentially replace the * signs and balance the given equation.
 $30*6*5*4*2*27$

Ans  1. $\div, \times, +, -, =$

 2. $+, -, \times, +, =$

 3. $+, \times, -, =, \div$

 4. $+, \times, -, +, =$

Question ID : 26433079094

Option 1 ID : 264330310381

Option 2 ID : 264330310383

Option 3 ID : 264330310382

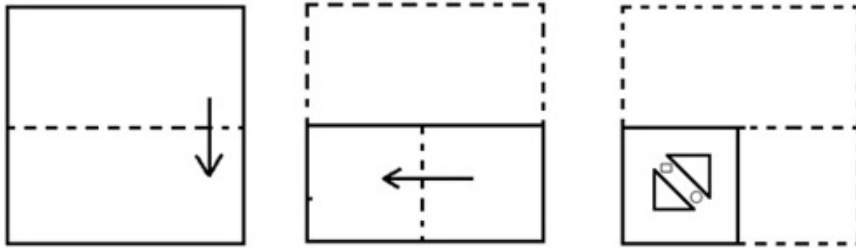
Option 4 ID : 264330310380

Status : Answered

Chosen Option : 1

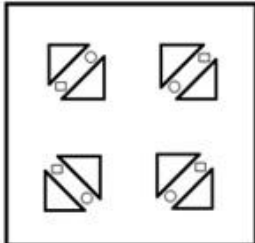


Q.2 The sequence of folding a piece of paper and the manner in which the folded paper has been cut is shown below. Choose a figure which would most closely resemble the unfolded form of the paper.

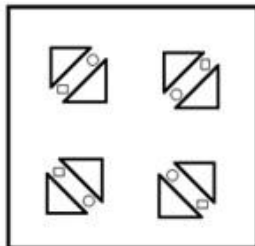


Ans

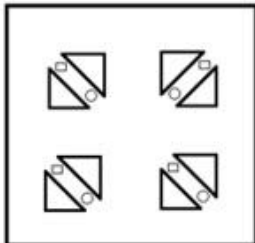
✗ 1.



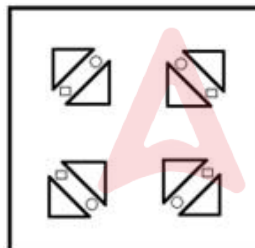
✗ 2.



✗ 3.



✓ 4.



Question ID : 264330112320

Option 1 ID : 264330441366

Option 2 ID : 264330441367

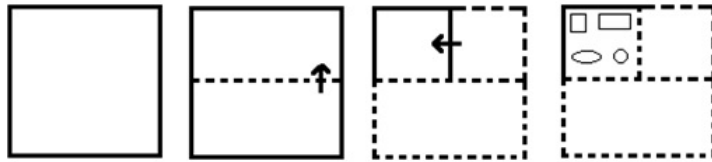
Option 3 ID : 264330441368

Option 4 ID : 264330441365

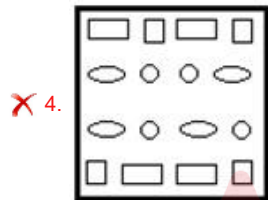
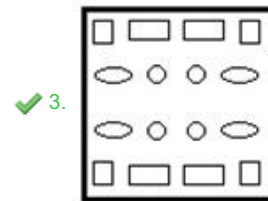
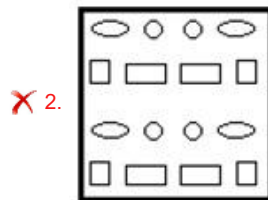
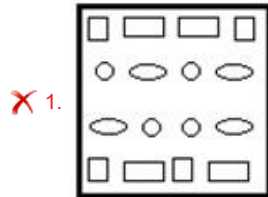
Status : Answered

Chosen Option : 4

Q.3 The sequence of folding a piece of paper and the manner in which the folded paper is cut is shown in the following figures. How would this paper look when unfolded?



Ans



Question ID : 26433074797
 Option 1 ID : 264330293278
 Option 2 ID : 264330293279
 Option 3 ID : 264330293276
 Option 4 ID : 264330293277
 Status : Answered
 Chosen Option : 3

Q.4 Seven people, P, Q, R, S, T, U and V, are sitting in a straight row facing north. Only two people sit to the right of S. Only three people sit between Q and S. R sits to the immediate right of S and to the immediate left of U. T sits to the immediate right of P. P is not a neighbour of Q.

Who sits second from the extreme left end of the row?

- Ans
- ☒ 1. Q
 - ☒ 2. V
 - ☒ 3. R
 - ☒ 4. P

Question ID : 26433089502

Option 1 ID : 264330351509

Option 2 ID : 264330351510

Option 3 ID : 264330351512

Option 4 ID : 264330351511

Status : Answered

Chosen Option : 1

Q.5 In a certain code language, 'BASKET' is written as '64' and 'TANKER' is written as '75'. How will 'VACATION' be written in that language?

- Ans
- ☒ 1. 93
 - ☒ 2. 102
 - ☒ 3. 101
 - ☒ 4. 90

Question ID : 26433092581

Option 1 ID : 264330363614

Option 2 ID : 264330363616

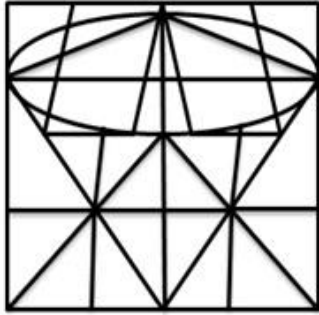
Option 3 ID : 264330363615

Option 4 ID : 264330363613

Status : Answered

Chosen Option : 1

Q.6 Select the option figure that is embedded in the given figure. (Rotation is not allowed).

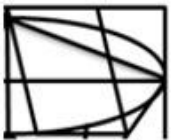


Ans

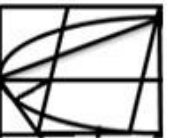
✗ 1.



✓ 2.



✗ 3.



✗ 4.



Question ID : 264330114397

Option 1 ID : 264330449673

Option 2 ID : 264330449676

Option 3 ID : 264330449675

Option 4 ID : 264330449674

Status : Answered

Chosen Option : 2

Q.7 Select the set in which the numbers are related in the same way as are the numbers of the following sets.

(NOTE: Operations should be performed on the whole numbers, without breaking down the numbers into its constituent digits. E.g. 13 – Operations on 13 such as adding/deleting/multiplying etc. to 13 can be performed. Breaking down 13 into 1 and 3 and then performing mathematical operations on 1 and 3 is not allowed)

(13, 40, 115)

(5, 16, 43)

Ans ✓ 1. (11, 34, 97)

✗ 2. (6, 19, 72)

✗ 3. (9, 26, 73)

✗ 4. (7, 22, 71)

Question ID : 26433052102

Option 1 ID : 264330203712

Option 2 ID : 264330203711

Option 3 ID : 264330203713

Option 4 ID : 264330203710

Status : Answered

Chosen Option : 1

Q.8 Select the number from among the given options that can replace the question mark (?) in the following series.

5, 12, 40, 152, 600, ?

- Ans ☒ 1. 3233
☒ 2. 3123
☒ 3. 2392
☒ 4. 4344

Question ID : 264330109762
Option 1 ID : 264330431328
Option 2 ID : 264330431325
Option 3 ID : 264330431326
Option 4 ID : 264330431327
Status : Answered
Chosen Option : 3

Q.9 Which figure should replace the question mark (?) in the following series to continue the pattern?

L	I	C	△	△	C	I	A	
△		I		A		C		?
K	C	A	L	L	I	△	△	

Ans

- ☒ 1.

C	△
	△
I	A
- ☒ 2.

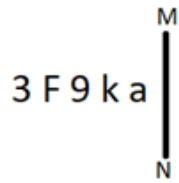
△	△
	I
A	C
- ☒ 3.

△	C
	△
A	I
- ☒ 4.

A	I
	△
△	C

Question ID : 264330129625
Option 1 ID : 264330507869
Option 2 ID : 264330507868
Option 3 ID : 264330507867
Option 4 ID : 264330507866
Status : Not Answered
Chosen Option : --

Q.10 Select the correct mirror image of the given figure when the mirror is placed at MN as shown below.



- Ans ☒ 1. ɹ ɹ ɹ ɹ ɹ
- ☐ 2. 9 ɹ 6 ɹ ɹ
- ☐ 3. ɹ 9 k ɹ ɹ
- ☐ 4. a ɹ ɹ ɹ ɹ

Question ID : 264330166656

Option 1 ID : 264330653665

Option 2 ID : 264330653664

Option 3 ID : 264330653666

Option 4 ID : 264330653663

Status : Answered

Chosen Option : 1

Q.11 Two statements are given, followed by two conclusions numbered I and II. Assuming the statements to be true, even if they seem to be at variance with commonly known facts, decide which of the conclusions logically follow(s) from the statements.

Statements:

All crows are birds.

Some crows are pets.

Conclusions:

I. All pets are birds.

II. Some birds are crows.

- Ans ☒ 1. Only Conclusion II follows.
- ☐ 2. Both Conclusions I and II follow.
- ☐ 3. Only Conclusion I follows.
- ☐ 4. Neither Conclusion I nor II follows.

Question ID : 26433081678

Option 1 ID : 264330320546

Option 2 ID : 264330320547

Option 3 ID : 264330320545

Option 4 ID : 264330320548

Status : Answered

Chosen Option : 1

Q.12 Which of the following option figures will complete the pattern in the figure given below?



Ans

✗ 1.



✗ 2.



✗ 3.

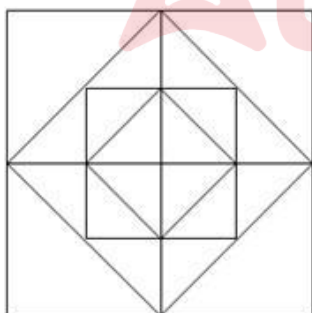


✓ 4.



Question ID : 26433080607
Option 1 ID : 264330316363
Option 2 ID : 264330316364
Option 3 ID : 264330316361
Option 4 ID : 264330316362
Status : Answered
Chosen Option : 4

Q.13 How many squares are there in the following figure?



Ans ✓ 1. 12

✗ 2. 10

✗ 3. 14

✗ 4. 16

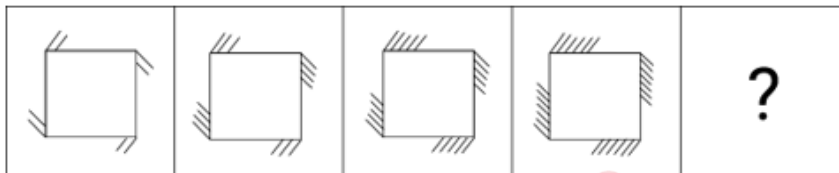
Question ID : 26433076734
Option 1 ID : 264330301001
Option 2 ID : 264330301000
Option 3 ID : 264330301002
Option 4 ID : 264330301003
Status : Answered
Chosen Option : 1

Q.14 Select the option that is related to the fourth term in the same way as the first term is related to the second term and the fifth term is related to the sixth term.
18 : 27 :: ? : 36 :: 16 : 24

- Ans ☒ 1. 24
☒ 2. 23
☒ 3. 32
☒ 4. 42

Question ID : 26433059930
Option 1 ID : 264330234553
Option 2 ID : 264330234555
Option 3 ID : 264330234554
Option 4 ID : 264330234552
Status : Answered
Chosen Option : 1

Q.15 Select the figure from among the given options that can replace the question mark (?) in the following series.



Ans

- ☒ 1.
- ☒ 2.
- ☒ 3.
- ☒ 4.

Question ID : 264330110108
Option 1 ID : 264330432711
Option 2 ID : 264330432712
Option 3 ID : 264330432709
Option 4 ID : 264330432710
Status : Answered
Chosen Option : 2

Q.16 Which of the following letter clusters will replace the question mark (?) in the given series to make it logically complete?
HLS, KJP, NHM, QFJ, ?

- Ans
- ☒ 1. TDF
 - ☒ 2. TDH
 - ☒ 3. UDG
 - ☒ 4. TDG

Question ID : 264330102222

Option 1 ID : 264330401356

Option 2 ID : 264330401355

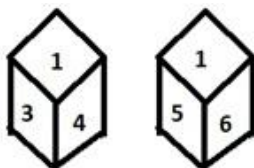
Option 3 ID : 264330401353

Option 4 ID : 264330401354

Status : Answered

Chosen Option : 4

Q.17 Six numbers 1, 2, 3, 4, 5 and 6 are written on different faces of a dice. Two positions of this dice are shown in the figure. Find the number on the face opposite to 5.



- Ans
- ☒ 1. 4
 - ☒ 2. 6
 - ☒ 3. 2
 - ☒ 4. 3

Question ID : 264330117894

Option 1 ID : 264330463393

Option 2 ID : 264330463394

Option 3 ID : 264330463391

Option 4 ID : 264330463392

Status : Answered

Chosen Option : 4

Q.18 Select the figure that will replace the question mark (?) in the following figure series.



- Ans
- ☒ 1.
 - ☒ 2.
 - ☒ 3.
 - ☒ 4.

Question ID : 264330108958

Option 1 ID : 264330428111

Option 2 ID : 264330428109

Option 3 ID : 264330428112

Option 4 ID : 264330428110

Status : Answered

Chosen Option : 1

Q.19 Select the correct combination of mathematical signs to sequentially replace the * signs and to balance the given equation.
 $32 * 6 * 12 * 67 * 2 = 81$

- Ans
- ☒ 1. +, x, -, +
 - ☒ 2. ÷, -, x, +
 - ☒ 3. -, x, ÷, -
 - ☒ 4. x, ÷, +, -

Question ID : 26433092505
 Option 1 ID : 264330363310
 Option 2 ID : 264330363309
 Option 3 ID : 264330363312
 Option 4 ID : 264330363311
 Status : Answered
 Chosen Option : 3

Q.20 Which of the following option figures will complete the pattern in the figure given below?



Ans

- ☒ 1.
- ☒ 2.
- ☒ 3.
- ☒ 4.

Question ID : 26433080640
 Option 1 ID : 264330316494
 Option 2 ID : 264330316495
 Option 3 ID : 264330316496
 Option 4 ID : 264330316493
 Status : Answered
 Chosen Option : 4

Q.21 Which of the following option figures will complete the pattern in the figure given below?



Ans



Question ID : 26433080608
Option 1 ID : 264330316367
Option 2 ID : 264330316366
Option 3 ID : 264330316365
Option 4 ID : 264330316368

Status : Answered

Chosen Option : 2

Q.22 Select the option that is related to the fifth letter-cluster in the same way as the second letter-cluster is related to the first letter-cluster and the fourth letter-cluster is related to the third letter-cluster.
HEAD : IGDH :: HAND : ICQH :: BACK : ?


- Ans
- ✗ 1. DCFO
- ✗ 2. CCEO
- ✗ 3. CDFO
- ✓ 4. CCFO

Question ID : 26433076455
Option 1 ID : 264330299886
Option 2 ID : 264330299887
Option 3 ID : 264330299885
Option 4 ID : 264330299884

Status : Answered

Chosen Option : 4

Q.23 Six numbers 3, 2, 5, 1, 7 and 6 are written on different faces of a dice. Two positions of this dice are shown in the figure. Find the number on the face opposite to 5.



- Ans
- ☒ 1. 3
 - ☒ 2. 6
 - ☒ 3. 1
 - ☒ 4. 2

Question ID : 264330129790

Option 1 ID : 264330508391

Option 2 ID : 264330508393

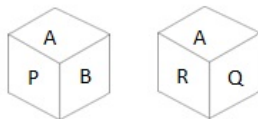
Option 3 ID : 264330508392

Option 4 ID : 264330508394

Status : Answered

Chosen Option : 4

Q.24 Six letters A, B, C, P, Q and R are written on different faces of a dice. Two positions of this dice are shown in the figure. Find the letter on the face opposite to Q.



- Ans
- ☒ 1. C
 - ☒ 2. R
 - ☒ 3. P
 - ☒ 4. B

Question ID : 264330109202

Option 1 ID : 264330429085

Option 2 ID : 264330429086

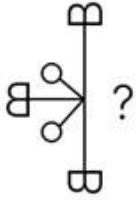
Option 3 ID : 264330429088

Option 4 ID : 264330429087

Status : Answered

Chosen Option : 4

Q.25 Select the figure from the given options that will replace the question mark (?) in the figure given below to complete the pattern so that the final image is symmetrical.



Ans

- ✗ 1.
- ✓ 2.
- ✗ 3.
- ✗ 4.

Question ID : 264330114729

Option 1 ID : 264330451003

Option 2 ID : 264330451004

Option 3 ID : 264330451002

Option 4 ID : 264330451001

Status : Answered

Chosen Option : 2

Section : Numerical Ability

Q.1 The product of two numbers is 8427. If the HCF of these numbers is 53, then find the greater number.

Ans

- ✓ 1. 159
- ✗ 2. 189
- ✗ 3. 109
- ✗ 4. 119

Question ID : 264330112793

Option 1 ID : 264330443257

Option 2 ID : 264330443258

Option 3 ID : 264330443259

Option 4 ID : 264330443260

Status : Answered

Chosen Option : 1

Q.2 Three successive discounts of 15%, 10% and 8% are equivalent to a single discount of k%. Find the value of k.

Ans

- ✗ 1. 27.62%
- ✗ 2. 28.62%
- ✓ 3. 29.62%
- ✗ 4. 30.62%

Question ID : 264330183820

Option 1 ID : 264330720956

Option 2 ID : 264330720957

Option 3 ID : 264330720958

Option 4 ID : 264330720959

Status : Answered

Chosen Option : 1

Q.3 A cloth merchant sold half of his clothes at 30% profit, half of the remaining clothes at 20% loss, and the rest was sold at his cost price. In the total transaction, what is his gain or loss percentage?

- Ans
- ☒ 1. Profit 12%
 - ☒ 2. Profit 10%
 - ☒ 3. Loss 10%
 - ☒ 4. Loss 12%

Question ID : 264330118420

Option 1 ID : 264330465083

Option 2 ID : 264330465081

Option 3 ID : 264330465082

Option 4 ID : 264330465084

Status : Answered

Chosen Option : 2

Q.4 The monthly income of a person is ₹45,000. If his income is increased by 25%, then find his new monthly income (in ₹).

- Ans
- ☒ 1. 55,500
 - ☒ 2. 58,250
 - ☒ 3. 56,250
 - ☒ 4. 11,250

Question ID : 264330103464

Option 1 ID : 264330406161

Option 2 ID : 264330406162

Option 3 ID : 264330406164

Option 4 ID : 264330406163

Status : Answered

Chosen Option : 1

Q.5 Area of the first triangle is 420 cm^2 and its base is 60 cm, whereas, area of the second triangle is 1500 cm^2 and its base is 7.5 cm. What will be the ratio of the height of the first triangle to that of the second triangle?

- Ans
- ☒ 1. 6 : 325
 - ☒ 2. 7 : 200
 - ☒ 3. 7 : 250
 - ☒ 4. 5 : 242

Question ID : 264330131357

Option 1 ID : 264330514540

Option 2 ID : 264330514541

Option 3 ID : 264330514542

Option 4 ID : 264330514539

Status : Not Answered

Chosen Option : --

Q.6

The value of $\frac{0.0203 \times 2.92}{0.7 \times 0.0365 \times 2.9}$ is:

- Ans ☒ 1. 0.8
☒ 2. 0.3
☒ 3. 0.7
☒ 4. 0.5

Question ID : 264330103651

Option 1 ID : 264330406910

Option 2 ID : 264330406912

Option 3 ID : 264330406911

Option 4 ID : 264330406909

Status : Answered

Chosen Option : 1

Q.7

For what value of n are $3^n - 2^n$ and $3^n + 2^n$ prime?

- Ans ☒ 1. 4
☒ 2. 2
☒ 3. 5
☒ 4. 3

Question ID : 264330104276

Option 1 ID : 264330409407

Option 2 ID : 264330409405

Option 3 ID : 264330409408

Option 4 ID : 264330409406

Status : Answered

Chosen Option : 2

Q.8 The average of 10 terms is 50 and the average of the first 5 terms is 45. What is the average of the remaining 5 terms?

- Ans ☒ 1. 55
☒ 2. 40
☒ 3. 45
☒ 4. 50

Question ID : 264330129919

Option 1 ID : 264330508910

Option 2 ID : 264330508909

Option 3 ID : 264330508908

Option 4 ID : 264330508907

Status : Answered

Chosen Option : 1

Q.9 A person takes a loan of ₹4,000 for 3 years at 8% per annum compound interest. He repaid ₹2,000 in each of the first and second years. The amount he should pay at the end of the third year to clear all his debt is:

- Ans
- ☒ 1. ₹500.20
 - ☒ 2. ₹567.12
 - ☒ 3. ₹546.05
 - ☒ 4. ₹525.34

Question ID : 264330103736

Option 1 ID : 264330407249

Option 2 ID : 264330407252

Option 3 ID : 264330407251

Option 4 ID : 264330407250

Status : Not Answered

Chosen Option : --

Q.10 A man decides to travel 90 kilometres in 9 hours, partly by foot and partly on a bicycle. If his speed on foot is 9 kilometres/hour and bicycle is 18 kilometres/hour, what is the distance he travels on foot?

- Ans
- ☒ 1. 72 kilometres
 - ☒ 2. 85 kilometres
 - ☒ 3. 100 kilometres
 - ☒ 4. 68 kilometres

Question ID : 264330104363

Option 1 ID : 264330409754

Option 2 ID : 264330409755

Option 3 ID : 264330409756

Option 4 ID : 264330409753

Status : Answered

Chosen Option : 1

Q.11 A solid metallic hemisphere of radius 9 cm is melted and recast into a right circular cone of height 72 cm. The radius of the base of the cone is:

- Ans
- ☒ 1. $5\frac{1}{2}$ cm
 - ☒ 2. $8\frac{1}{2}$ cm
 - ☒ 3. $3\frac{1}{2}$ cm
 - ☒ 4. $4\frac{1}{2}$ cm

Question ID : 264330119369

Option 1 ID : 264330467766

Option 2 ID : 264330467765

Option 3 ID : 264330467763

Option 4 ID : 264330467764

Status : Not Answered

Chosen Option : --

Q.12 Bhumika deposited ₹8,000, which amounted to ₹9,200 after 3 years at $r\%$ p.a. simple interest. Had the interest rate been 2% more, that is, $(r + 2)\%$ per annum, what amount would she have received?

- Ans ☒ 1. ₹9,680
☒ 2. ₹9,890
☒ 3. ₹9,700
☒ 4. ₹9,600

Question ID : 264330182530

Option 1 ID : 264330715912

Option 2 ID : 264330715914

Option 3 ID : 264330715911

Option 4 ID : 264330715913

Status : Answered

Chosen Option : 1

Q.13 The monthly incomes of A and B are in the ratio of 3 : 4, and their monthly expenditures are in the ratio 2 : 3. If each saves ₹6,000 per month, then find the monthly income of the B.

- Ans ☒ 1. ₹22,000
☒ 2. ₹23,000
☒ 3. ₹25,000
☒ 4. ₹24,000

Question ID : 264330105996

Option 1 ID : 264330416285

Option 2 ID : 264330416286

Option 3 ID : 264330416288

Option 4 ID : 264330416287

Status : Answered

Chosen Option : 4

Q.14 Radha and Shama undertake a piece of work for ₹36,000. Radha can do it in 20 days and Shama can do it in 60 days. With the help of Rama, they finished it in 10 days. How much should Rama be paid for her contribution?

- Ans ☒ 1. ₹15,000
☒ 2. ₹20,000
☒ 3. ₹12,000
☒ 4. ₹8,000

Question ID : 264330104223

Option 1 ID : 264330409193

Option 2 ID : 264330409194

Option 3 ID : 264330409196

Option 4 ID : 264330409195

Status : Answered

Chosen Option : 3

Q.15 A man increases his consumption of sugar by 44.44% because the price of sugar is reduced by P%. Find P. (Expenditure remains constant.)

Ans

✓ 1. $30\frac{10}{13}\%$

✗ 2. $32\frac{10}{13}\%$

✗ 3. $20\frac{10}{13}\%$

✗ 4. $25\frac{10}{13}\%$

Question ID : 264330129397

Option 1 ID : 264330506956

Option 2 ID : 264330506957

Option 3 ID : 264330506954

Option 4 ID : 264330506955

Status : Answered

Chosen Option : 1

Section : Computer Proficiency

Q.1 Which of the following is a shortcut key to open the Font dialog box in MS Word 365?

Ans ✓ 1. Ctrl+Shift+F

✗ 2. Ctrl+Alt+F

✗ 3. Alt+F

✗ 4. Ctrl+F

Question ID : 264330178602

Option 1 ID : 264330700435

Option 2 ID : 264330700436

Option 3 ID : 264330700438

Option 4 ID : 264330700437

Status : Answered

Chosen Option : 3

Q.2 Which organisation oversees the development and standardisation of technologies for the World Wide Web?

Ans ✗ 1. IEEE

✗ 2. IEIT

✗ 3. WHO

✓ 4. W3C

Question ID : 264330182113

Option 1 ID : 264330714291

Option 2 ID : 264330714292

Option 3 ID : 264330714294

Option 4 ID : 264330714293

Status : Answered

Chosen Option : 4

Q.3 What is the default page orientation in Microsoft Word 365?

- Ans ☒ 1. Portrait
☒ 2. Square
☒ 3. Pentagon
☒ 4. Landscape

Question ID : 264330180714
 Option 1 ID : 264330708824
 Option 2 ID : 264330708825
 Option 3 ID : 264330708826
 Option 4 ID : 264330708823
 Status : Answered
 Chosen Option : 1

Q.4 In MS Excel 365, the default row height and the column width, respectively, are:

- Ans ☒ 1. 10 and 8.52
☒ 2. 20 and 10.51
☒ 3. 5 and 10.43
☒ 4. 15 and 8.43

Question ID : 264330175960
 Option 1 ID : 264330690135
 Option 2 ID : 264330690136
 Option 3 ID : 264330690138
 Option 4 ID : 264330690137
 Status : Not Answered
 Chosen Option : --

Q.5 Under which of the following tabs of the MS Word 365 ribbon are the Bullets and Numbering options present?

- Ans ☒ 1. Insert
☒ 2. Mailings
☒ 3. Home
☒ 4. File

Question ID : 264330180832
 Option 1 ID : 264330709293
 Option 2 ID : 264330709292
 Option 3 ID : 264330709291
 Option 4 ID : 264330709294
 Status : Answered
 Chosen Option : 1

Q.6 In MS Excel 365, A Contour map is an example of which of the following charts?

- Ans ☒ 1. Surface Chart
☒ 2. Scatter chart
☒ 3. Radar chart
☒ 4. Doughnut chart

Question ID : 264330175954
 Option 1 ID : 264330690112
 Option 2 ID : 264330690111
 Option 3 ID : 264330690113
 Option 4 ID : 264330690114
 Status : Answered
 Chosen Option : 3

Q.7 Which of the following features can you use if you are having problems or want to find out how to do something in MS Word 365?

- Ans ☒ 1. Review
☒ 2. Insert
☒ 3. Help
☒ 4. Edit

Question ID : 264330178604
 Option 1 ID : 264330700446
 Option 2 ID : 264330700445
 Option 3 ID : 264330700444
 Option 4 ID : 264330700443
 Status : Answered
 Chosen Option : 3

Q.8 Which of the following shortcut keys is used in MS Word 365 to move by one preview page when zoomed out?

- Ans ☒ 1. Ctrl+Alt+I
☒ 2. Page UP or Page Down
☒ 3. Ctrl+P
☒ 4. Ctrl+D

Question ID : 264330178600
 Option 1 ID : 264330700427
 Option 2 ID : 264330700429
 Option 3 ID : 264330700428
 Option 4 ID : 264330700430
 Status : Answered
 Chosen Option : 2

Q.9 In Microsoft Excel 365, what is a function?

- Ans ☒ 1. A method to create animations in spreadsheets
☒ 2. A design tool for creating charts and graphs
☒ 3. A predefined formula that performs calculations using values in a specific order
☒ 4. A text formatting option for cells

Question ID : 264330180688
 Option 1 ID : 264330708722
 Option 2 ID : 264330708720
 Option 3 ID : 264330708719
 Option 4 ID : 264330708721
 Status : Answered
 Chosen Option : 3

Q.10 Files or documents that are included with the email are commonly referred to as _____.

- Ans
- ☐ 1. add-ons
 - ☐ 2. appends
 - ☒ 3. attachments
 - ☐ 4. supplements

Question ID : **264330173546**

Option 1 ID : **264330680663**

Option 2 ID : **264330680666**

Option 3 ID : **264330680665**

Option 4 ID : **264330680664**

Status : **Answered**

Chosen Option : **3**

