



Odisha Sub-ordinate Staff Selection Commission  
(OSSSC), Govt. of Odisha

Roll No.	
Application No.	-
Participant Name	
Test Center Name	Prakruti
Test Date	10/11/2025
Test Time	12:00 PM - 1:30 PM
Subject	OSSSC Preliminary Examination for the district cadre posts of RI, ICDS Supervisor, ARI, Amin & SFS under CRE 2023 IV
Application Photograph	
Registration photograph	

**\* Note**  
Correct Answer will carry 1 mark per Question.  
Incorrect Answer will carry 0.33 Negative mark per Question.

1. Options shown in green color with a tick icon are correct.  
2. Chosen option on the right of the question indicates the option selected by the candidate.

Adda247

Test Prime

ALL EXAMS, ONE SUBSCRIPTION



**1,00,000+**  
Mock Tests



Personalised  
Report Card



Unlimited  
Re-Attempt



**600+**  
Exam Covered



**25,000+** Previous  
Year Papers



**500%**  
Refund



**ATTEMPT FREE MOCK NOW**

Section : Mathematics

Q.1 A man sold an article for ₹324, thereby gaining 20%. The cost of the article (in ₹) was:

- Ans ☒ 1. 270
- ☐ 2. 320
- ☐ 3. 360
- ☐ 4. 260

Question Type :	MCQ
Question ID :	441009574292
Option 1 ID :	4410092252288
Option 2 ID :	4410092252289
Option 3 ID :	4410092252291
Option 4 ID :	4410092252290
Status :	Answered
Chosen Option :	1

Q.2 A baker mixes sugar and flour in the ratio 2 : 3. He uses 8 kg of sugar and adds enough flour to maintain the same ratio. Then he takes one-fourth of the total mixture to make a smaller dough. To this smaller dough, he wants to add more flour so that the new sugar to flour ratio becomes 2 : 5. How much flour must he add?

- Ans ☐ 1. 1 kg
- ☐ 2. 1.5 kg
- ☐ 3. 2.5 kg
- ☒ 4. 2 kg

Question Type :	MCQ
Question ID :	441009219427
Option 1 ID :	441009861021
Option 2 ID :	441009861022
Option 3 ID :	441009861024
Option 4 ID :	441009861023
Status :	Not Answered
Chosen Option :	--

Q.3	Simplify: $3^3 - 4^2 + \left(\frac{38}{19}\right)^2 - 3 + 7 \times 6^{2075}$
Ans	<div><div>✖ 1. 55</div><div>✔ 2. 54</div><div>✖ 3. 57</div><div>✖ 4. 51</div></div>

Question Type :	MCQ
Question ID :	441009535600
Option 1 ID :	4410092097799
Option 2 ID :	4410092097796
Option 3 ID :	4410092097797
Option 4 ID :	4410092097798
Status :	Answered
Chosen Option :	2

Q.4	Two numbers are in the ratio 7 : 11. If 6 is added to each of the
Ans	<div><div>✖ 1. 40</div><div>✔ 2. 42</div><div>✖ 3. 36</div><div>✖ 4. 32</div></div>


Question Type :	MCQ
Question ID :	441009105657
Option 1 ID :	441009420830
Option 2 ID :	441009420827
Option 3 ID :	441009420828
Option 4 ID :	441009420829
Status :	Answered
Chosen Option :	2

Q.5	An ornament is made by mixing gold costing ₹4,000 per gm and silver costing ₹75 per gm in the ratio of 3 : 1. What is the cost of 8 gm of this ornament?
Ans	<div><div>✖</div>1. ₹21,600</div>
	<div><div>✖</div>2. ₹16,400</div>
	<div><div>✔</div>3. ₹24,150</div>
	<div><div>✖</div>4. ₹19,800</div>

Question Type :	MCQ
Question ID :	441009920707
Option 1 ID :	4410093636799
Option 2 ID :	4410093636801
Option 3 ID :	4410093636802
Option 4 ID :	4410093636800
Status :	Not Answered
Chosen Option :	--

Q.6	The sum of the present ages of Hitesh and Jitesh is 36 years. After 2 years from now, Hitesh's age will be three times that of Jitesh. Hitesh's present age (in years) is:
Ans	<div><div>✖</div>1. 18</div>
	<div><div>✖</div>2. 24</div>
	<div><div>✔</div>3. 28</div>
	<div><div>✖</div>4. 34</div>

Question Type :	MCQ
Question ID :	4410091220250
Option 1 ID :	4410094814426
Option 2 ID :	4410094814424
Option 3 ID :	4410094814423
Option 4 ID :	4410094814425
Status :	Answered
Chosen Option :	3



Q.7	The value of $204 \div [9 \times (12 - 5 + 6)] \times 9$ is:
Ans	<div><div>✓ 1.</div><div><math>\frac{204}{13}</math></div></div>
	<div><div>✗ 2.</div><div><math>\frac{211}{13}</math></div></div>
	<div><div>✗ 3.</div><div><math>\frac{200}{13}</math></div></div>
	<div><div>✗ 4.</div><div><math>\frac{199}{13}</math></div></div>

Question Type :	MCQ
Question ID :	441009910941
Option 1 ID :	4410093598015
Option 2 ID :	4410093598018
Option 3 ID :	4410093598016
Option 4 ID :	4410093598017
Status :	Answered
Chosen Option :	1

Q.8	The value of $2.8888... + 1.8181... - 1.1111... $ is:
Ans	<div><div>✓ 1.</div><div><math>\frac{356}{99}</math></div></div>
	<div><div>✗ 2.</div><div><math>\frac{351}{102}</math></div></div>
	<div><div>✗ 3.</div><div><math>\frac{355}{108}</math></div></div>
	<div><div>✗ 4.</div><div><math>\frac{359}{100}</math></div></div>

Question Type :	MCQ
Question ID :	441009914299
Option 1 ID :	4410093611447
Option 2 ID :	4410093611449
Option 3 ID :	4410093611450
Option 4 ID :	4410093611448
Status :	Not Answered
Chosen Option :	--

Q.9

Three pipes can fill a cistern in 10, 15 and 20 hours, respectively. The three pipes are opened one after the other in the given order, with a fixed time gap between them; the cistern is filled in 5 hours. Assuming the first pipe is opened at the start of the 5 hours, find the time gap (in minutes) between the opening the pipes.

Ans

✖ 1. 60

✔ 2. 30

✖ 3. 45

✖ 4. 15

Question Type :

MCQ

Question ID :

441009932835

Option 1 ID :

4410093685111

Option 2 ID :

4410093685108

Option 3 ID :

4410093685110

Option 4 ID :

4410093685109

Status :

Not Answered

Chosen Option :

--

Q.10

A and B start a cafe with a capital ₹5,100 and ₹3,400, respectively. After a year, out of the profit of ₹5,800, A gets his share of profit plus some money as his salary. In A receives a total of ₹7,100, what is the salary amount (in ₹)?

Ans

✖ 1. 3,615

✖ 2. 3,619

✔ 3. 3,620

✖ 4. 3,626

Question Type :

MCQ

Question ID :

441009544043

Option 1 ID :

4410092131570

Option 2 ID :

4410092131569

Option 3 ID :

4410092131568

Option 4 ID :

4410092131571

Status :

Not Answered

Chosen Option :

--

Q.11 A car travels from a city P to another city R, a distance of 120 km. It covers the first 60 km at 48 km/hr and the remaining 60 km at 60 km/hr. What is the average speed of the whole journey? (Rounded off to two decimal places)

- Ans
- ✗ 1. 52.55 km/hr
  - ✗ 2. 50.45 km/hr
  - ✗ 3. 51.76 km/hr
  - ✓ 4. 53.33 km/hr

Question Type :	MCQ
Question ID :	441009982580
Option 1 ID :	4410093884022
Option 2 ID :	4410093884020
Option 3 ID :	4410093884021
Option 4 ID :	4410093884023
Status :	Answered
Chosen Option :	4

Q.12 The area of a sector whose radius is 21.5 cm is 236.5 sq.cm. Find its perimeter.

- Ans
- ✗ 1. 22 cm
  - ✗ 2. 58 cm
  - ✓ 3. 65 cm
  - ✗ 4. 46 cm

Question Type :	MCQ
Question ID :	441009592648
Option 1 ID :	4410092325709
Option 2 ID :	4410092325711
Option 3 ID :	4410092325710
Option 4 ID :	4410092325712
Status :	Not Answered
Chosen Option :	--



Q.13	While covering a distance of 54 km, a man noticed that after cy the distance covered by him was $\frac{7}{9}$ of the remaining distance. 7
Ans	✓ 1. 18.9
	✗ 2. 19.5
	✗ 3. 18.7
	✗ 4. 19.9

Question Type :	MCQ
Question ID :	441009920837
Option 1 ID :	4410093637319
Option 2 ID :	4410093637322
Option 3 ID :	4410093637321
Option 4 ID :	4410093637320
Status :	Not Answered
Chosen Option :	--

Q.14	A dealer buys two articles X and Y for ₹4,500 each. He marks each of them at the same price. He sells X by giving two successive discounts of 22% and 26% and still earns ₹748 as profit. If he sells Y at a single discount of 17%, then what is the profit percentage on Y?
Ans	✗ 1. 66.7%
	✗ 2. 66%
	✗ 3. 67%
	✓ 4. 67.7%

Question Type :	MCQ
Question ID :	441009915900
Option 1 ID :	4410093617853
Option 2 ID :	4410093617854
Option 3 ID :	4410093617852
Option 4 ID :	4410093617851
Status :	Not Answered
Chosen Option :	--

Q.15	P is a point outside the circle with centre O. PQ and PR are two secants from P to the circle. If $PQ = (x^2 + 18)$ cm and $PR = 379$ cm, find x.
Ans	<div><div>✖</div>1. 361</div>
	<div><div>✖</div>2. 379</div>
	<div><div>✖</div>3. 15</div>
	<div><div>✔</div>4. 19</div>

Question Type :	MCQ
Question ID :	441009592692
Option 1 ID :	4410092325887
Option 2 ID :	4410092325888
Option 3 ID :	4410092325885
Option 4 ID :	4410092325886
Status :	Not Answered
Chosen Option :	--

Q.16	If compound interest is charged on a certain sum for 3 years at 5% per annum, compounded annually, and the amount becomes ₹74,088, find the sum.
Ans	<div><div>✖</div>1. ₹61,500</div>
	<div><div>✔</div>2. ₹64,000</div>
	<div><div>✖</div>3. ₹65,500</div>
	<div><div>✖</div>4. ₹62,000</div>

Question Type :	MCQ
Question ID :	441009542362
Option 1 ID :	4410092124847
Option 2 ID :	4410092124845
Option 3 ID :	4410092124846
Option 4 ID :	4410092124844
Status :	Answered
Chosen Option :	3

Q.17 A can do a work in 12 days and B in 18 days. If they work on it together for 3 days, then the fraction of the remaining work is:

- Ans ☒ 1.  $\frac{5}{9}$
- ☒ 2.  $\frac{7}{12}$
- ☒ 3.  $\frac{8}{9}$
- ☒ 4.  $\frac{7}{9}$

Question Type :	MCQ
Question ID :	441009832345
Option 1 ID :	4410093282588
Option 2 ID :	4410093282589
Option 3 ID :	4410093282591
Option 4 ID :	4410093282590
Status :	Answered
Chosen Option :	2

Q.18 A shopkeeper fixes the marked price of an item 75% above its cost price. What percentage discount should he allow on the marked price to gain 47%?

- Ans ☒ 1. 18%
- ☒ 2. 19%
- ☒ 3. 16%
- ☒ 4. 14%

Question Type :	MCQ
Question ID :	441009566551
Option 1 ID :	4410092221325
Option 2 ID :	4410092221326
Option 3 ID :	4410092221324
Option 4 ID :	4410092221327
Status :	Answered
Chosen Option :	1

Q.19 The price of an article increased from ₹4,200 to ₹5,754. What is the percentage increase in the price?

- Ans
- 1. 35%
  - 2. 33%
  - 3. 27%
  - 4. 37%

Question Type :	MCQ
Question ID :	441009934367
Option 1 ID :	4410093691205
Option 2 ID :	4410093691206
Option 3 ID :	4410093691204
Option 4 ID :	4410093691203
Status :	Answered
Chosen Option :	1

Q.20 The average price of three items of furniture is ₹16,995. If their prices are in the ratio 3 : 5 : 7, the price of the cheapest item (in ₹) is:

- Ans
- 1. 7,931
  - 2. 10,197
  - 3. 5,665
  - 4. 3,399

Question Type :	MCQ
Question ID :	441009919946
Option 1 ID :	4410093633758
Option 2 ID :	4410093633755
Option 3 ID :	4410093633757
Option 4 ID :	4410093633756
Status :	Not Answered
Chosen Option :	--

Q.21 Which flagship scheme provides income support of ₹6,000 annually to small and marginal farmers?

- Ans
- ✓ 1. PM-KISAN
  - ✗ 2. PMGSY
  - ✗ 3. PMAY-G
  - ✗ 4. DAY-NULM

Question Type :	MCQ
Question ID :	441009963034
Option 1 ID :	4410093805507
Option 2 ID :	4410093805508
Option 3 ID :	4410093805506
Option 4 ID :	4410093805509
Status :	Answered
Chosen Option :	1

Q.22 What kind of disputes do tribunals usually deal with?

- Ans
- ✗ 1. Religious matters
  - ✓ 2. Technical and administrative matters
  - ✗ 3. Personal disputes
  - ✗ 4. Political campaigns

Question Type :	MCQ
Question ID :	441009682270
Option 1 ID :	4410092683058
Option 2 ID :	4410092683059
Option 3 ID :	4410092683057
Option 4 ID :	4410092683060
Status :	Answered
Chosen Option :	2

Q.23 Which is the largest coalfield in Odisha by geological reserve?

- Ans
- ✓ 1. Talcher Coalfield
  - ✗ 2. Angul Coalfield
  - ✗ 3. Koraput Coalfield
  - ✗ 4. Ib River Coalfield

Question Type :	MCQ
Question ID :	4410091203294
Option 1 ID :	4410094746707
Option 2 ID :	4410094746709
Option 3 ID :	4410094746708
Option 4 ID :	4410094746706
Status :	Answered
Chosen Option :	1

Q.24 What is the target set by the new National Broadband Mission 2.0 launched in January 2025?

- Ans
- ☐ 1. Wi-Fi connectivity to 100 colleges by 2030
  - ☒ 2. Optical fibre connectivity to 2.7 lakh villages by 2030
  - ☐ 3. 5G towers installation in 50 districts by 2030
  - ☐ 4. Optical fibre connectivity to 100 cities by 2030

Question Type :	MCQ
Question ID :	441009800661
Option 1 ID :	4410093156738
Option 2 ID :	4410093156739
Option 3 ID :	4410093156740
Option 4 ID :	4410093156737
Status :	Not Answered
Chosen Option :	--

Q.25 India's land boundary in the northwest is shared with which of the following countries?

- Ans
- ☐ 1. China and Bhutan
  - ☐ 2. Myanmar and Nepal
  - ☐ 3. Bangladesh and Sri Lanka
  - ☒ 4. Afghanistan and Pakistan

Question Type :	MCQ
Question ID :	441009212868
Option 1 ID :	441009835644
Option 2 ID :	441009835646
Option 3 ID :	441009835647
Option 4 ID :	441009835645
Status :	Answered
Chosen Option :	4

Q.26	Which of the following musical instruments belongs to the category of membranophones?
Ans	<div><div><div>✖</div><div>1. Flute</div></div></div>
	<div><div><div>✔</div><div>2. Tabla</div></div></div>
	<div><div><div>✖</div><div>3. Santoor</div></div></div>
	<div><div><div>✖</div><div>4. Veena</div></div></div>

Question Type :	MCQ
Question ID :	441009632569
Option 1 ID :	4410092484421
Option 2 ID :	4410092484422
Option 3 ID :	4410092484420
Option 4 ID :	4410092484419
Status :	Not Answered
Chosen Option :	--

Q.27	What type of financial support does the Nano Unicorn Scheme provide?
Ans	<div><div><div>✖</div><div>1. ₹2 lakh loan</div></div></div>
	<div><div><div>✖</div><div>2. ₹50,000 grant</div></div></div>
	<div><div><div>✔</div><div>3. ₹1 lakh loan</div></div></div>
	<div><div><div>✖</div><div>4. ₹75,000 grant</div></div></div>

Question Type :	MCQ
Question ID :	441009800591
Option 1 ID :	4410093156459
Option 2 ID :	4410093156457
Option 3 ID :	4410093156458
Option 4 ID :	4410093156460
Status :	Not Answered
Chosen Option :	--

Q.28	One of the notable changes in the Income-Tax Act, 2025, is the replacement of the earlier system of 'Assessment Year / Previous Year' with which simplified concept?
Ans	<div><div><div>✖</div><div>1. Accounting Year</div></div><div><div>✔</div><div>2. Tax Year</div></div><div><div>✖</div><div>3. Fiscal Year</div></div><div><div>✖</div><div>4. Income Year</div></div></div>

Question Type :	MCQ
Question ID :	4410091206939
Option 1 ID :	4410094761285
Option 2 ID :	4410094761284
Option 3 ID :	4410094761282
Option 4 ID :	4410094761283
Status :	Not Answered
Chosen Option :	--

Q.29	Who among the following authored the book 'Careless People: A Cautionary Tale of Power, Greed, and Lost Idealism', released in March 2025?
Ans	<div><div><div>✖</div><div>1. Roxane Gay</div></div><div><div>✖</div><div>2. Naomi Wolf</div></div><div><div>✔</div><div>3. Sarah Wynn Williams</div></div><div><div>✖</div><div>4. Barbara Ehrenreich</div></div></div>

Question Type :	MCQ
Question ID :	441009683451
Option 1 ID :	4410092687784
Option 2 ID :	4410092687783
Option 3 ID :	4410092687781
Option 4 ID :	4410092687782
Status :	Not Answered
Chosen Option :	--




Q.30	What was the name of Siddhartha Gautama's wife before his renunciation?
Ans	<div><div><div><div><div></div></div><div>1. Yashodhara</div></div><div><div><div></div></div><div>2. Sujata</div></div><div><div><div></div></div><div>3. Subhadhra</div></div><div><div><div></div></div><div>4. Gopa</div></div></div></div>

Question Type :	MCQ
Question ID :	4410091191410
Option 1 ID :	4410094699810
Option 2 ID :	4410094699813
Option 3 ID :	4410094699812
Option 4 ID :	4410094699811
Status :	Answered
Chosen Option :	1

Q.31	Which of the following prominent freedom fighters and social activists founded the Satyabadi Bana Vidyalaya, a school established in Satyabadi village in 1909?
Ans	<div><div><div><div><div></div></div><div>1. Gangadhar Meher</div></div><div><div><div></div></div><div>2. Madhusudan Das</div></div><div><div><div></div></div><div>3. Fakirmohan Senapati</div></div><div><div><div></div></div><div>4. Gopabandhu Das</div></div></div></div>

Question Type :	MCQ
Question ID :	441009935042
Option 1 ID :	4410093693888
Option 2 ID :	4410093693886
Option 3 ID :	4410093693885
Option 4 ID :	4410093693887
Status :	Answered
Chosen Option :	4



Q.32 Which Portuguese Governor implemented the Blue Water Policy to strengthen naval dominance in the Indian Ocean?

- Ans
- ✓ 1. Francisco de Almeida
  - ✗ 2. Nino da Cunha
  - ✗ 3. Alfonso de Albuquerque
  - ✗ 4. Vasco da Gama


Question Type :	MCQ
Question ID :	4410091197207
Option 1 ID :	4410094722768
Option 2 ID :	4410094722767
Option 3 ID :	4410094722765
Option 4 ID :	4410094722766
Status :	Not Answered
Chosen Option :	--

Q.33 Under which Article is the Comptroller and Auditor General of India appointed and removed?

- Ans
- ✗ 1. Article 348
  - ✗ 2. Article 248
  - ✗ 3. Article 48
  - ✓ 4. Article 148

Question Type :	MCQ
Question ID :	441009930005
Option 1 ID :	4410093673970
Option 2 ID :	4410093673969
Option 3 ID :	4410093673971
Option 4 ID :	4410093673968
Status :	Answered
Chosen Option :	4

Q.34	The National Tiger Conservation Authority (NTCA) was constituted under which of the following Acts in India?	
Ans	<div><div><div>✔</div><div>1. Wildlife (Protection) Act, 1972</div></div><div><div>✖</div><div>2. Forest (Conservation) Act, 1980</div></div><div><div>✖</div><div>3. Biological Diversity Act, 2002</div></div><div><div>✖</div><div>4. Environment (Protection) Act, 1986</div></div></div>	<div><div>Question Type : MCQ</div><div>Question ID : 441009798243</div><div>Option 1 ID : 4410093146973</div><div>Option 2 ID : 4410093146974</div><div>Option 3 ID : 4410093146972</div><div>Option 4 ID : 4410093146971</div><div>Status : Answered</div><div>Chosen Option : 1</div></div>
Q.35	Who among the following received The Hindu Contribution to Society Award 2025?	
Ans	<div><div><div>✖</div><div>1. Chindi Varadarajulu</div></div><div><div>✖</div><div>2. Kalki Subramaniam</div></div><div><div>✔</div><div>3. Supraja Dharini</div></div><div><div>✖</div><div>4. Thilagavathi Palani</div></div></div>	<div><div>Question Type : MCQ</div><div>Question ID : 441009803082</div><div>Option 1 ID : 4410093166448</div><div>Option 2 ID : 4410093166449</div><div>Option 3 ID : 4410093166451</div><div>Option 4 ID : 4410093166450</div><div>Status : Not Answered</div><div>Chosen Option : --</div></div>



Q.36 Which major reform under Industrial Policy 1991 aimed at abolishing industrial licensing except for a few selected hazardous industries?

- Ans
- ☐ 1. Introduction of Public-Private Partnerships (PPP)
  - ☐ 2. Abolition of the MRTP Act
  - ☒ 3. Liberalisation of Industrial Licensing Policy
  - ☐ 4. Establishment of Special Economic Zones (SEZs)

Question Type :	MCQ
Question ID :	4410091015616
Option 1 ID :	4410094013975
Option 2 ID :	4410094013976
Option 3 ID :	4410094013978
Option 4 ID :	4410094013977
Status :	Answered
Chosen Option :	2

Q.37 According to the Odisha Government Budget 2025–26, a \_\_\_\_\_ outlay was allocated for the Shree Jagannath Darshan Yojana presented in February 2025.

- Ans
- ☐ 1. ₹20 crore
  - ☐ 2. ₹25 crore
  - ☐ 3. ₹35 crore
  - ☒ 4. ₹30 crore

Question Type :	MCQ
Question ID :	4410091041701
Option 1 ID :	4410094115858
Option 2 ID :	4410094115859
Option 3 ID :	4410094115861
Option 4 ID :	4410094115860
Status :	Answered
Chosen Option :	1

Q.38	Which of the following statements best describes the contributions of Dr. BR Ambedkar in Indian history?
Ans	<div><div><div><div><div><div></div></div></div><div><div><div></div></div></div></div><div>1. Ambedkar was a prominent leader in India's struggle for independence, leading the Quit India Movement and advocating for peasant rights.</div></div></div> <div><div><div><div><div><div></div></div></div><div><div><div></div></div></div></div><div>2. Ambedkar was a prominent poet and writer in the 19th century, known for his nationalist writings that inspired India's freedom fighters.</div></div></div> <div><div><div><div><div><div></div></div></div><div><div><div></div></div></div></div><div>3. Ambedkar was a social reformer and the principal architect of India's constitution, advocating for social justice, equality and the rights of marginalised communities.</div></div></div> <div><div><div><div><div><div></div></div></div><div><div><div></div></div></div></div><div>4. Ambedkar was a military strategist who played a crucial role in organising India's armed resistance against British colonial rule.</div></div></div>

Question Type :	MCQ
Question ID :	441009631439
Option 1 ID :	4410092479899
Option 2 ID :	4410092479901
Option 3 ID :	4410092479900
Option 4 ID :	4410092479902
Status :	Answered
Chosen Option :	3

Q.39	In which year did the India-China war break out due to border tensions in NEFA and Ladakh?
Ans	<div><div><div><div><div><div></div></div></div><div><div><div></div></div></div></div><div>1. 1960</div></div></div> <div><div><div><div><div><div></div></div></div><div><div><div></div></div></div></div><div>2. 1965</div></div></div> <div><div><div><div><div><div></div></div></div><div><div><div></div></div></div></div><div>3. 1956</div></div></div> <div><div><div><div><div><div></div></div></div><div><div><div></div></div></div></div><div>4. 1962</div></div></div>

Question Type :	MCQ
Question ID :	441009993821
Option 1 ID :	4410093927380
Option 2 ID :	4410093927382
Option 3 ID :	4410093927379
Option 4 ID :	4410093927381
Status :	Answered
Chosen Option :	2

Q.40	Which of the following Articles of the Indian Constitution, introduced by the 42 <sup>nd</sup> Constitutional Amendment in 1976, requires the State to provide free legal aid to economically weaker sections?
Ans	<div><div>✖</div>1. Article 43A</div>
	<div><div>✖</div>2. Article 38(2)</div>
	<div><div>✔</div>3. Article 39A</div>
	<div><div>✖</div>4. Article 48A</div>

Question Type :	MCQ
Question ID :	441009501588
Option 1 ID :	4410091961522
Option 2 ID :	4410091961525
Option 3 ID :	4410091961523
Option 4 ID :	4410091961524
Status :	Not Answered
Chosen Option :	--

Section : English

Q.41	Select the most appropriate meaning of the given proverb.  Two wrongs do not make a right
Ans	<div><div>✔</div>1. Committing another wrong in response to an initial wrong does not correct the situation or make it right.</div>
	<div><div>✖</div>2. It is acceptable to respond to a wrong with another wrong if it is done for a good cause.</div>
	<div><div>✖</div>3. Retaliating against someone who wrongs you is justified if done correctly.</div>
	<div><div>✖</div>4. Two wrongs will balance out and lead to a positive outcome in the end.</div>

Question Type :	MCQ
Question ID :	441009411708
Option 1 ID :	4410091612225
Option 2 ID :	4410091612223
Option 3 ID :	4410091612222
Option 4 ID :	4410091612224
Status :	Answered
Chosen Option :	2

Q.42	<p>Sentences of a paragraph are given below. While the first and the last sentences (S1 and S6) are in the correct order, the sentences in between are jumbled up. Arrange the sentences in the correct order to form a meaningful and coherent paragraph.</p> <p>S1. Hipparchus is a Greek astronomer. P. Thus, he has the credit of being the founder of the trigonometry branch in mathematics. Q. He was born in Nicaragua and did most of his works at Rhodes observatory. R. He also compiled a table of chord lengths similar to modern trigonometry tables. S. He recorded the accurate position of about 850 stars and categorised them on their brightness level. S6. He used the term 'first magnitude', which is still used by astronomers.1197</p>	
Ans	<div><div><div><div></div><div>1. SPRQ</div></div></div></div>	
	<div><div><div><div></div><div>2. QSRP</div></div></div></div>	
	<div><div><div><div></div><div>3. SQRP</div></div></div></div>	
	<div><div><div><div></div><div>4. QSPR</div></div></div></div>	

Question Type :	MCQ
Question ID :	441009428853
Option 1 ID :	4410091674933
Option 2 ID :	4410091674930
Option 3 ID :	4410091674932
Option 4 ID :	4410091674931
Status :	Not Answered
Chosen Option :	--

Q.43	<p>Select the option that expresses the given sentence in the past tense form.</p> <p>They can solve the puzzle quickly.</p>	
Ans	<div><div><div><div></div><div>1. They solved the puzzle quickly.</div></div></div></div>	
	<div><div><div><div></div><div>2. They had solved the puzzle quickly.</div></div></div></div>	
	<div><div><div><div></div><div>3. They could solve the puzzle quickly.</div></div></div></div>	
	<div><div><div><div></div><div>4. They have solved the puzzle quickly.</div></div></div></div>	

Question Type :	MCQ
Question ID :	441009348433
Option 1 ID :	4410091360051
Option 2 ID :	4410091360053
Option 3 ID :	4410091360050
Option 4 ID :	4410091360052
Status :	Answered
Chosen Option :	2

Q.44	Select the most appropriate meaning of the given word.
	Pirating
Ans	<div><div>✖</div>1. Sneezing</div>
	<div><div>✖</div>2. Seizing</div>
	<div><div>✔</div>3. Raiding</div>
	<div><div>✖</div>4. Rehearsing</div>

Question Type :	MCQ
Question ID :	441009979496
Option 1 ID :	4410093870513
Option 2 ID :	4410093870512
Option 3 ID :	4410093870511
Option 4 ID :	4410093870514
Status :	Not Answered
Chosen Option :	--

Q.45	Select the option that expresses the given sentence in future continuous tense form.
	He gained the medal through his painful travail.
Ans	<div><div>✔</div>1. He will be gaining the medal through his painful travail.</div>
	<div><div>✖</div>2. He will gain the medal through his painful travail.</div>
	<div><div>✖</div>3. He has gained the medal through his painful travail.</div>
	<div><div>✖</div>4. He was gaining the medal through his painful travail.</div>

Question Type :	MCQ
Question ID :	441009341285
Option 1 ID :	4410091331133
Option 2 ID :	4410091331131
Option 3 ID :	4410091331132
Option 4 ID :	4410091331134
Status :	Answered
Chosen Option :	1



Q.46

Select the most appropriate option to fill in the blank.

Louisiana has one of the highest poverty rates in the country, and the programme \_\_\_\_\_ focusses on those most burdened by outstanding debts.

Ans

✖ 1. alternately

✔ 2. specifically

✖ 3. especially

✖ 4. alternatively

Question Type :	MCQ
Question ID :	441009113230
Option 1 ID :	441009450454
Option 2 ID :	441009450453
Option 3 ID :	441009450451
Option 4 ID :	441009450452
Status :	Answered
Chosen Option :	2

Q.47

Select the most appropriate option that rectifies the underlined word in the given sentence.

We can go to the beach and it doesn't rain.

Ans

✖ 1. though

✔ 2. if

✖ 3. but

✖ 4. unless

Question Type :	MCQ
Question ID :	441009342061
Option 1 ID :	4410091334229
Option 2 ID :	4410091334227
Option 3 ID :	4410091334226
Option 4 ID :	4410091334228
Status :	Answered
Chosen Option :	3

Q.48

Sentences of a paragraph are given below. While some sentences (S1, S2 and S4) are given, the sentence S3 is missing. Select the option that will meaningfully fill in the gap.

S1. In the early 20<sup>th</sup> century, urban planning began to shift from simple infrastructural expansion to a more holistic approach.  
S2. Cities were no longer viewed as mere clusters of buildings and roads, but as living organisms with dynamic needs.  
S3. \_\_\_\_\_.  
S4. This transformation laid the groundwork for sustainable development practices seen in today's smart cities.

Ans

✗ 1. Many cities ignored these changes and continued expanding horizontally.

✓ 2. Sociologists began collaborating with architects to design people-centric environments.

✗ 3. Engineers continued building bridges and tunnels at an unprecedented rate.

✗ 4. The invention of the automobile made commutes longer and more difficult.

Question Type : MCQ

Question ID : 441009890757

Option 1 ID : 4410093517014

Option 2 ID : 4410093517013

Option 3 ID : 4410093517012

Option 4 ID : 4410093517015

Status : Not Answered

Chosen Option : --

Q.49

Select the option that expresses the given sentence in reported speech.

Bharath said to me, "I shall do the task."

Ans

✗ 1. Bharath said to me he do the task.

✓ 2. Bharath told me that he would do the task.

✗ 3. Bharath told to me he will do the task.

✗ 4. Bharath said to me he would done the task.

Question Type : MCQ

Question ID : 4410091140438

Option 1 ID : 4410094496717

Option 2 ID : 4410094496715

Option 3 ID : 4410094496716

Option 4 ID : 4410094496718

Status : Answered

Chosen Option : 2

Q.50

Select the option that can be used as a one-word substitute for the given phrase.

A person who believes that pleasure or happiness is the highest good

Ans

✖ 1. Nihilist

✖ 2. Stoic

✔ 3. Hedonist

✖ 4. Existentialist

Question Type :

MCQ

Question ID :

441009345486

Option 1 ID :

4410091347894

Option 2 ID :

4410091347895

Option 3 ID :

4410091347893

Option 4 ID :

4410091347896

Status :

Answered

Chosen Option :

2

Q.51

Select the most appropriate option to fill in the blanks.

We visited \_\_\_\_ Taj Mahal last winter and enjoyed the view of \_\_\_\_ Yamuna flowing nearby.

Ans

✖ 1. a; the

✖ 2. the; a

✔ 3. the; the

✖ 4. a; a

Question Type :

MCQ

Question ID :

441009322432

Option 1 ID :

4410091255912

Option 2 ID :

4410091255911

Option 3 ID :

4410091255913

Option 4 ID :

4410091255910

Status :

Answered

Chosen Option :

3

Q.52	Identify the INCORRECTLY spelt word in the given sentence.  All the machinery was abruptly shut down during the power outage.	
Ans	<div>✗ 1. abruptly</div> <div>✗ 2. power</div> <div>✗ 3. outage</div> <div>✓ 4. machinery</div>	

Question Type :	MCQ
Question ID :	441009881936
Option 1 ID :	4410093481397
Option 2 ID :	4410093481398
Option 3 ID :	4410093481399
Option 4 ID :	4410093481400
Status :	Answered
Chosen Option :	3

Q.53	Select the option that expresses the given sentence in direct speech.  The mother told her son that the things would be sorted out then.	
Ans	<div>✗ 1. The mother said to her son, "The things will be sorted out then."</div> <div>✗ 2. The mother said to her son, "That the things will be sorted out now."</div> <div>✗ 3. The mother said to her son, "Every thing will be sorted out then."</div> <div>✓ 4. The mother said to her son, "The things will be sorted out now."</div>	

Question Type :	MCQ
Question ID :	441009479194
Option 1 ID :	4410091872126
Option 2 ID :	4410091872125
Option 3 ID :	4410091872128
Option 4 ID :	4410091872127
Status :	Answered
Chosen Option :	2

Q.54

Identify the error in pronoun in the given sentence and select the option that rectifies this error.

The employee whom is working on the project is very skilled.

Ans

✓ 1. who

✗ 2. them

✗ 3. which

✗ 4. they

Question Type :	MCQ
Question ID :	441009904614
Option 1 ID :	4410093572313
Option 2 ID :	4410093572316
Option 3 ID :	4410093572314
Option 4 ID :	4410093572315
Status :	Answered
Chosen Option :	1

Q.55

Select the option that expresses the given sentence in active voice.

My work had been finished by Umama.

Ans

✗ 1. Umama had finish my work.

✗ 2. Umama has finish my work.

✓ 3. Umama had finished my work.

✗ 4. Umama finish my work.

Question Type :	MCQ
Question ID :	4410091140426
Option 1 ID :	4410094496669
Option 2 ID :	4410094496668
Option 3 ID :	4410094496667
Option 4 ID :	4410094496670
Status :	Answered
Chosen Option :	1

Q.56

Select the most appropriate meaning of the underlined idiom/proverb/phrase in the given sentence.  
  
The manager hired more people for the upcoming project as two heads are better than one.

Ans

✗ 1. One man is enough for a task

✗ 2. Don't pass judgement on others

✗ 3. Good things will happen if you wait patiently

✔ 4. It's better to have more people for a task

Question Type :	MCQ
Question ID :	441009412706
Option 1 ID :	4410091616214
Option 2 ID :	4410091616217
Option 3 ID :	4410091616215
Option 4 ID :	4410091616216
Status :	Not Answered
Chosen Option :	--

Q.57

Select the most appropriate option to fill in the blank.  
  
When the celebrity was asked about his controversy, he \_\_\_\_\_ denied to save his status.

Ans

✗ 1. concurrently

✗ 2. accurately

✔ 3. vehemently

✗ 4. happily

Question Type :	MCQ
Question ID :	441009106387
Option 1 ID :	441009423574
Option 2 ID :	441009423572
Option 3 ID :	441009423573
Option 4 ID :	441009423571
Status :	Answered
Chosen Option :	3

Comprehension:
Read the given passage and answer the questions that follow.  Disney's Magic Kingdoms represent more than just theme parks—they are carefully crafted cultural spaces that blend storytelling, technology and consumerism. Opened in 1971 in Florida as a counterpart to Disneyland in California, Walt Disney World's Magic Kingdom transports visitors into immersive worlds populated by beloved characters and fantasy landscapes. Divided into themed lands such as Fantasyland, Adventureland and Tomorrowland, the park draws millions annually with its combination of nostalgia, innovation and spectacle.  At the heart of the Magic Kingdom lies Cinderella Castle, a symbol of dreams made tangible through architectural grandeur. Behind the enchantment, however, lies a sophisticated enterprise. The park is a meticulously managed ecosystem where narratives are choreographed, employee behaviour is scripted and visitor experiences are engineered. Walt Disney's vision of 'The Happiest Place on Earth' is as much about emotional immersion as it is about strategic branding and economic success.

SubQuestion No : 58
Q.58 Which of the following statements is a fact, according to the passage?
Ans <div>✗ 1. Walt Disney was born in California.</div>
<div>✓ 2. The Magic Kingdom opened in 1971 in Florida.</div>
<div>✗ 3. Cinderella Castle was modeled after a European cathedral.</div>
<div>✗ 4. Adventureland is based on a true story.</div>

Question Type :	MCQ
Question ID :	441009195324
Option 1 ID :	441009769189
Option 2 ID :	441009769187
Option 3 ID :	441009769188
Option 4 ID :	441009769190
Status :	Not Answered
Chosen Option :	--

Comprehension:

Read the given passage and answer the questions that follow.

Disney's Magic Kingdoms represent more than just theme parks—they are carefully crafted cultural spaces that blend storytelling, technology and consumerism. Opened in 1971 in Florida as a counterpart to Disneyland in California, Walt Disney World's Magic Kingdom transports visitors into immersive worlds populated by beloved characters and fantasy landscapes. Divided into themed lands such as Fantasyland, Adventureland and Tomorrowland, the park draws millions annually with its combination of nostalgia, innovation and spectacle.

At the heart of the Magic Kingdom lies Cinderella Castle, a symbol of dreams made tangible through architectural grandeur. Behind the enchantment, however, lies a sophisticated enterprise. The park is a meticulously managed ecosystem where narratives are choreographed, employee behaviour is scripted and visitor experiences are engineered. Walt Disney's vision of 'The Happiest Place on Earth' is as much about emotional immersion as it is about strategic branding and economic success.

SubQuestion No : 59

Q.59 What can be inferred from the passage?

Ans ☒ 1. The Magic Kingdoms balance fantasy with commercial interests.

☒ 2. Walt Disney opposed corporate expansion.

☒ 3. All theme parks are modeled after Disney.

☒ 4. Visitors prefer unscripted experiences.

Question Type : MCQ

Question ID : 441009195325

Option 1 ID : 441009769191

Option 2 ID : 441009769194

Option 3 ID : 441009769192

Option 4 ID : 441009769193

Status : Not Answered

Chosen Option : --



	<b>Comprehension:</b>
	Read the given passage and answer the questions that follow.  Disney's Magic Kingdoms represent more than just theme parks—they are carefully crafted cultural spaces that blend storytelling, technology and consumerism. Opened in 1971 in Florida as a counterpart to Disneyland in California, Walt Disney World's Magic Kingdom transports visitors into immersive worlds populated by beloved characters and fantasy landscapes. Divided into themed lands such as Fantasyland, Adventureland and Tomorrowland, the park draws millions annually with its combination of nostalgia, innovation and spectacle.  At the heart of the Magic Kingdom lies Cinderella Castle, a symbol of dreams made tangible through architectural grandeur. Behind the enchantment, however, lies a sophisticated enterprise. The park is a meticulously managed ecosystem where narratives are choreographed, employee behaviour is scripted and visitor experiences are engineered. Walt Disney's vision of 'The Happiest Place on Earth' is as much about emotional immersion as it is about strategic branding and economic success.
	<b>SubQuestion No : 60</b>
Q.60	Select the most appropriate ANTONYM of the given word.  Immersion
Ans	<div>✗ 1. Expansion</div> <div>✗ 2. Engagement</div> <div>✗ 3. Attraction</div> <div>✓ 4. Detachment</div>

Question Type :	MCQ
Question ID :	441009195326
Option 1 ID :	441009769196
Option 2 ID :	441009769197
Option 3 ID :	441009769198
Option 4 ID :	441009769195
Status :	Not Answered
Chosen Option :	--

Q.61	"ନାନା ମୁନିଙ୍କର ନାନା ମତ" ଲୋକୋକ୍ତିର ଅର୍ଥ କ'ଣ?
Ans	<div><div>✓</div>1. ଭିନ୍ନ ବ୍ୟକ୍ତିଙ୍କ ଭିନ୍ନ ଚିନ୍ତାଧାରା</div> <div><div>✗</div>2. ମୁନିଙ୍କ ଶରଣ ପଡିବା</div> <div><div>✗</div>3. ମୁନିଙ୍କ କଥା ମାନିବା</div> <div><div>✗</div>4. ମୁନିଙ୍କଠାରୁ ମତ ଲୋଡ଼ିବା</div>

Question Type :	MCQ
Question ID :	4410091192399
Option 1 ID :	4410094703526
Option 2 ID :	4410094703527
Option 3 ID :	4410094703525
Option 4 ID :	4410094703524
Status :	Answered
Chosen Option :	1

Q.62	ବାକ୍ୟ: ତାଙ୍କର କାମରେ ଅଧିକ ଧ୍ୟାନ ଦେବା ଆବଶ୍ୟକ ଅଛି। କେଉଁଠାରେ ଭୁଲ ରହିଛି?
Ans	<div><div>✓</div>1. ତାଙ୍କର → ତାଙ୍କୁ</div> <div><div>✗</div>2. କାମରେ → କାମ ପାଇଁ</div> <div><div>✗</div>3. ଅଧିକ ଧ୍ୟାନ → ଧ୍ୟାନ ଦେବା</div> <div><div>✗</div>4. ଆବଶ୍ୟକ → ଆବଶ୍ୟକ ନୁହେଁ</div>

Question Type :	MCQ
Question ID :	4410091080012
Option 1 ID :	4410094257276
Option 2 ID :	4410094257278
Option 3 ID :	4410094257277
Option 4 ID :	4410094257279
Status :	Answered
Chosen Option :	3

Q.63	“କୁପ” ଉଚ୍ଚାରଣ ଶବ୍ଦ କ’ଣ?
Ans	<div><div>✗</div>1. ନାଳ</div>
	<div><div>✓</div>2. କୁଆ</div>
	<div><div>✗</div>3. ନଳା</div>
	<div><div>✗</div>4. ପୋଖରୀ</div>

Question Type :	MCQ
Question ID :	4410091235871
Option 1 ID :	4410094877066
Option 2 ID :	4410094877067
Option 3 ID :	4410094877068
Option 4 ID :	4410094877069
Status :	Answered
Chosen Option :	2

Q.64	ନିମ୍ନଲିଖିତ ବାକ୍ୟରେ ଉଲ୍ଲେଖିତ ଶବ୍ଦର ସମାନ୍ତରାଧିକାରୀ ଶବ୍ଦ ନିର୍ଣ୍ଣୟ କର । ଶ୍ରୀ "ଅରବିନ୍ଦ" ପଣ୍ଡିତଙ୍କଦ୍ୱାରା ଆଶ୍ରମ ଖୋଲିଥିଲେ ।
Ans	<div><div>✗</div>1. ଭିରି</div>
	<div><div>✗</div>2. ପଣ୍ଡିତ</div>
	<div><div>✗</div>3. ଦେବତା</div>
	<div><div>✓</div>4. ପତ୍ର</div>

Question Type :	MCQ
Question ID :	4410091198010
Option 1 ID :	4410094725945
Option 2 ID :	4410094725943
Option 3 ID :	4410094725946
Option 4 ID :	4410094725944
Status :	Not Answered
Chosen Option :	--

Q.65

ନିମ୍ନଲିଖିତ ପ୍ରଶ୍ନରେ ଦିଆଯାଇଥିବା ଚାରୋଟି ବିକଳ୍ପ ମଧ୍ୟରୁ ସେହି ବିକଳ୍ପକୁ ବାଛନ୍ତୁ, ଯାହା ପ୍ରଦତ୍ତ ପ୍ରବାଦ ବା ଲୋକବାଣୀର ଅର୍ଥକୁ ସର୍ବୋତ୍ତମ ଭାବରେ ପ୍ରକାଶ କରେ।  
  
ଉଡ଼ିଗଲା ଚଢ଼େଇର ପର ଗଣିବା

Ans

✓ 1. ଅତିବୁଦ୍ଧିଆ

✗ 2. ବୋକା ବନାଇବା

✗ 3. ଚଢ଼େଇ ଗଣିବା

✗ 4. ପକ୍ଷୀର ପର ଗଣିବା

Question Type :

MCQ

Question ID :

4410091237984

Option 1 ID :

4410094885465

Option 2 ID :

4410094885464

Option 3 ID :

4410094885467

Option 4 ID :

4410094885466

Status :

Answered

Chosen Option :

1

Q.66

ନିମ୍ନରେ ଦିଆଯାଇଥିବା ବିକଳ୍ପ ମଧ୍ୟରୁ ଉପଯୁକ୍ତ ସମାନାର୍ଥକବୋଧକ ଶବ୍ଦ ଚୟନ କରନ୍ତୁ ।  
କାଠ

Ans

✗ 1. ପାଠା

✗ 2. ମୟୂର

✗ 3. ପକ୍ଷୀ

✓ 4. କାକ

Question Type :

MCQ

Question ID :

4410091199807

Option 1 ID :

4410094733047

Option 2 ID :

4410094733046

Option 3 ID :

4410094733045

Option 4 ID :

4410094733044

Status :

Answered

Chosen Option :

4

Q.67 ପ୍ରଦତ୍ତ ବାକ୍ୟକୁ ଗୋଟିଏ ଶବ୍ଦରେ ପ୍ରକାଶ କର।

ଯିଏ ନିର୍ମାଣ କରେ

Ans ☒ 1. କର୍ତ୍ତା

☒ 2. ନିର୍ମାତା

☒ 3. ବିଧାତା

☒ 4. ପ୍ରଷ୍ଟ

Question Type : MCQ

Question ID : 4410091098001

Option 1 ID : 4410094329373

Option 2 ID : 4410094329376

Option 3 ID : 4410094329374

Option 4 ID : 4410094329375

Status : Answered

Chosen Option : 2

Q.68 ପ୍ରଦତ୍ତ ବାକ୍ୟରେ ରେଖାକିତ ହୋଇଥିବା ଶବ୍ଦ ସ୍ଥାନରେ ଏକ ଉପଯୁକ୍ତ ବାକ୍ୟଶ୍ଚ ବ୍ୟବହାର କରନ୍ତୁ।

ମୁଁ ମୋର ଗୁରୁଜନଙ୍କ ସମ୍ମାନ କରେ, କାରଣ ସେମାନେ ଆମର ଆଦର୍ଶ।

Ans ☒ 1. ଗୁରୁଜନଙ୍କୁ

☒ 2. ଗୁରୁଜନ

☒ 3. ଗୁରୁଜନମାନଙ୍କୁ

☒ 4. ପରିବର୍ତ୍ତନର ଆବଶ୍ୟକତା ନାହିଁ।

Question Type : MCQ

Question ID : 4410091134161

Option 1 ID : 4410094471937

Option 2 ID : 4410094471938

Option 3 ID : 4410094471939

Option 4 ID : 4410094471940

Status : Answered

Chosen Option : 1

Q.69	ଦିଆଯାଇଥିବା ବାକ୍ୟର ସଠିକ୍ ଓଡ଼ିଆ ଅନୁବାଦ କେଉଁଟି? Parliament reflects the diversity of the nation.
Ans	<div><div><div>✗</div><div>1. ଦେଶ ବିନା ବିବିଧତା ଭିନ୍ନ ଅଟେ ।</div></div><div><div>✗</div><div>2. ସଂସଦ ଅନେକ ରାଜ୍ୟ ରଖେ ନାହିଁ ।</div></div><div><div>✓</div><div>3. ସଂସଦ ଦେଶର ବିବିଧତାର ପ୍ରତିବିମ୍ବ ଅଟେ ।</div></div><div><div>✗</div><div>4. ବିବିଧତା ଅଟେ ଶେଷ ହୋଇଯାଇଛି ।</div></div></div>

Question Type :	MCQ
Question ID :	4410091069506
Option 1 ID :	4410094222184
Option 2 ID :	4410094222183
Option 3 ID :	4410094222181
Option 4 ID :	4410094222182
Status :	Answered
Chosen Option :	3

Q.70	ଦିଆଯାଇଥିବା ଓଡ଼ିଆ ବାକ୍ୟକୁ ଇଂରାଜୀରେ ଅନୁବାଦ କର । ମୁଁ ଗତକାଲି ସନ୍ଧ୍ୟାରୁ ତାଙ୍କୁ ଖୋଜୁଛି ।
Ans	<div><div><div>✗</div><div>1. I have searched him since last evening.</div></div><div><div>✗</div><div>2. I was searching him since last evening.</div></div><div><div>✓</div><div>3. I have been searching him since last evening.</div></div><div><div>✗</div><div>4. I am searching him since last evening.</div></div></div>

Question Type :	MCQ
Question ID :	4410091134700
Option 1 ID :	4410094474097
Option 2 ID :	4410094474099
Option 3 ID :	4410094474100
Option 4 ID :	4410094474098
Status :	Answered
Chosen Option :	3

Q.71	ଦିଆଯାଇଥିବା ଇଂରାଜୀ ବାକ୍ୟକୁ ଓଡ଼ିଆରେ ଅନୁବାଦ କର ।  The teacher is writing something important on the board.
Ans	✓ 1. ଶିକ୍ଷକ ବୋର୍ଡରେ କିଛି ଗୁରୁତ୍ୱପୂର୍ଣ୍ଣ କଥା ଲେଖୁଛନ୍ତି । ✗ 2. ଶିକ୍ଷକ ବୋର୍ଡରେ କିଛି ଗୁରୁତ୍ୱପୂର୍ଣ୍ଣ କଥା ଲେଖୁଥିଲେ । ✗ 3. ଶିକ୍ଷକ ବୋର୍ଡରେ କିଛି ଅର୍ଥହୀନ କଥା ଲେଖୁଛନ୍ତି । ✗ 4. ଶିକ୍ଷକ ତଳେ କିଛି ଗୁରୁତ୍ୱପୂର୍ଣ୍ଣ କଥା ଲେଖୁଛନ୍ତି ।

Question Type :	MCQ
Question ID :	4410091135089
Option 1 ID :	4410094475634
Option 2 ID :	4410094475635
Option 3 ID :	4410094475633
Option 4 ID :	4410094475632
Status :	Answered
Chosen Option :	1

Q.72	କ୍ରିୟା ବିଶେଷଣ ପଦ ବ୍ୟବହାର କରି ବାକ୍ୟଟିକୁ ସମ୍ପୂର୍ଣ୍ଣ କର ।  "ବର୍ଷାରେ ____ ଆସି ସେ ପଡ଼ି ଗଲା ।"
Ans	✓ 1. ତରତର ✗ 2. ସହଜରେ ✗ 3. ଧୀରେ ✗ 4. ଶାନ୍ତିରେ


Question Type :	MCQ
Question ID :	4410091197855
Option 1 ID :	4410094725335
Option 2 ID :	4410094725338
Option 3 ID :	4410094725336
Option 4 ID :	4410094725337
Status :	Answered
Chosen Option :	1

Q.73	ନିମ୍ନଲିଖିତ ବାକ୍ୟ ମଧ୍ୟରୁ କେଉଁଟି ସମ୍ପୂର୍ଣ୍ଣ ବାକ୍ୟ ଅଟେ?
Ans	<div><div>✓</div>1. ଛାତ୍ର ପଢ଼ିଲେ</div> <div><div>✗</div>2. ଶିକ୍ଷକ ପାଠ ପଢ଼ାଇ</div> <div><div>✗</div>3. ଘର ଭିତରେ</div> <div><div>✗</div>4. ବହୁତ ଗରମ</div>

Question Type :	MCQ
Question ID :	4410091079968
Option 1 ID :	4410094257101
Option 2 ID :	4410094257100
Option 3 ID :	4410094257102
Option 4 ID :	4410094257103
Status :	Answered
Chosen Option :	3

Q.74	ନିମ୍ନଲିଖିତ ବିକଳଗୁଡ଼ିକ ମଧ୍ୟରୁ ଦିଆଯାଇଥିବା ଓଡ଼ିଆ ବାକ୍ୟର ସଠିକ୍ ଇଂରାଜୀ ଅନୁବାଦ ବାଛନ୍ତୁ: ସଂସଦର ଅଧିବେଶନ ଆଜି ଆରମ୍ଭ ହେବ ।
Ans	<div><div>✓</div>1. The Parliament session will begin today.</div> <div><div>✗</div>2. The Parliament session began yesterday.</div> <div><div>✗</div>3. The Parliament will pass a bill today.</div> <div><div>✗</div>4. The Parliament building is under repair.</div>

Question Type :	MCQ
Question ID :	4410091201692
Option 1 ID :	4410094740552
Option 2 ID :	4410094740553
Option 3 ID :	4410094740555
Option 4 ID :	4410094740554
Status :	Answered
Chosen Option :	1





Q.75	ବାକ୍ୟର ଅଂଶଗୁଡ଼ିକୁ ସଠିକ କ୍ରମରେ ପୁନଃସଜ୍ଜିତ କରନ୍ତୁ ।  କିନ୍ତୁ, P. ବନ୍ୟା କେବଳ ଦେଶର Q. ବରଂ ଛୋଟ ଶାଖା ନଦୀ ଓ ଝରଣାଗୁଡ଼ିକ R. ପୃଷ୍ଠ୍ୟ ନଦୀଗୁଡ଼ିକରେ ସୀମିତ ନୁହେଁ, S. ମଧ୍ୟ ଭାଗୀ ଛତି କରିପାରନ୍ତି
Ans	✓ 1. PRQS  ✗ 2. SPQR  ✗ 3. QPRS  ✗ 4. RQPS

Question Type :	MCQ
Question ID :	4410091113119
Option 1 ID :	4410094388479
Option 2 ID :	4410094388477
Option 3 ID :	4410094388480
Option 4 ID :	4410094388478
Status :	Answered
Chosen Option :	1

	<b>Comprehension:</b>
	ନିମ୍ନ ଅନୁଛେଦଟିକୁ ପାଠ କରି ପ୍ରଚ୍ଛଦ ପ୍ରଶ୍ନଗୁଡ଼ିକର ଉତ୍ତର ଲେଖ ।  ଗ୍ରୀଷ୍ମ ଋତୁ ଓଡ଼ିଶାର ଏକ ଗୁରୁତ୍ୱପୂର୍ଣ୍ଣ ଋତୁ । ଏହି ଋତୁ ମାର୍ଚ୍ଚ ଶେଷରୁ ଆରମ୍ଭ ହୋଇ ଜୁନ୍ ଶେଷ ପର୍ଯ୍ୟନ୍ତ ଚାଲିଥାଏ । ଏ ସମୟରେ ସୂର୍ଯ୍ୟର ତାପମାନ ବହୁତ ବଢ଼ିଯାଏ । ଗଛଗୁଡ଼ିକ ଶୁଦ୍ଧିଯାଆନ୍ତି, ଜଳସ୍ତର କମିଯାଏ ଓ ଲୋକମାନେ ଘରୁ ବାହାରକୁ କମ୍ ବାହାରିବାକୁ ପସନ୍ଦ କରନ୍ତି । ଏହି ସମୟରେ ଲୋକେ ଜଳପାନ, ଲଘୁ, . ଓ.ଆର.ଏସ୍,ଆମ୍ବ ପଣା ଓ ବେଲ ପଣା ଭଳି ଶୀତଳ ପାନୀୟ ଖାଇଥାନ୍ତି । ଗ୍ରୀଷ୍ମରେ ଶରୀର ଜଳ ହରାଇଦେଇଥାଏ, ତେଣୁ ଅଧିକ ପାଣି ପିବା ଅତ୍ୟନ୍ତ ଆବଶ୍ୟକ । ଅଧିକ ତାପମାନ ଦେହରେ ଅସୁବିଧା ସୃଷ୍ଟି କରେ, ତେଣୁ ଏହି ସମୟରେ ହିଟ ଷ୍ଟୋକ ଭଳି ସମସ୍ୟା ଦେଖାଯାଏ । ଯଦିଓ ଏହି ଋତୁ ତାପମୟ, ତଥାପି ଏହି ସମୟରେ ଗଛରେ ଫଳ ଫୁଟିଥାଏ – ଆମ୍ବ, ଜାମୁକୋଳି ଇତ୍ୟାଦି । ବିଦ୍ୟାଳୟରେ ଗ୍ରୀଷ୍ମ ଅବକାଶ ଆସିଥାଏ, ଯାହାର ଲୋକେ ଉପଭୋଗ କରନ୍ତି । ତେଣୁ ଗ୍ରୀଷ୍ମ ଋତୁ ହେଉଛି ଚାଲେଞ୍ଜି ଏବଂ ଆନନ୍ଦ ଦୁହେଁର ମିଶ୍ରଣ ।
	<b>SubQuestion No : 76</b>
Q.76	ଅନୁଛେଦର ସ୍ୱରକୁ ଚିହ୍ନଟ କର ।
Ans	✗ 1. ଅବହେଳାମୂଳକ ✓ 2. ସୂଚନାମୂଳକ ✗ 3. ଉତ୍ତରାତ ✗ 4. ବ୍ୟଙ୍ଗାତ୍ମକ

Question Type :	MCQ
Question ID :	4410091190915
Option 1 ID :	4410094697961
Option 2 ID :	4410094697960
Option 3 ID :	4410094697959
Option 4 ID :	4410094697962
Status :	Answered
Chosen Option :	2

Comprehension:

ନିମ୍ନ ଅନୁଛେଦଟିକୁ ପାଠ କରି ପ୍ରଦତ୍ତ ପ୍ରଶ୍ନଗୁଡ଼ିକର ଉତ୍ତର ଲେଖ।


ଗ୍ରୀଷ୍ମ ଋତୁ ଓଡ଼ିଶାର ଏକ ଗୁରୁତ୍ୱପୂର୍ଣ୍ଣ ଋତୁ । ଏହି ଋତୁ ମାର୍ଚ୍ଚ ଶେଷରୁ ଆରମ୍ଭ ହୋଇ ଜୁନ୍ ଶେଷ ପର୍ଯ୍ୟନ୍ତ ଚାଲିଥାଏ । ଏ ସମୟରେ ସୂର୍ଯ୍ୟର ତାପମାନ ବହୁତ ବଢ଼ିଯାଏ । ଗଛଗୁଡ଼ିକ ଶୁଦ୍ଧିଯାଆନ୍ତି, ଜଳସ୍ତର କମିଯାଏ ଓ ଲୋକମାନେ ଘରୁ ବାହାରକୁ କମ୍ ବାହାରିବାକୁ ପସନ୍ଦ କରନ୍ତି । ଏହି ସମୟରେ ଲୋକେ ଜଳପାନ, ଲଘୁ, . ଓ.ଆର.ଏସ୍,ଆମ୍ବ ପଣା ଓ ବେଲ ପଣା ଭଳି ଶୀତଳ ପାନୀୟ ଖାଇଥାନ୍ତି । ଗ୍ରୀଷ୍ମରେ ଶରୀର ଜଳ ହରାଇଦେଇଥାଏ, ତେଣୁ ଅଧିକ ପାଣି ପିବା ଅତ୍ୟନ୍ତ ଆବଶ୍ୟକ । ଅଧିକ ତାପମାନ ଦେହରେ ଅସୁବିଧା ସୃଷ୍ଟି କରେ, ତେଣୁ ଏହି ସମୟରେ ହିଟ୍ ଷ୍ଟ୍ରୋକ ଭଳି ସମସ୍ୟା ଦେଖାଯାଏ । ଯଦିଓ ଏହି ଋତୁ ତାପମୟ, ତଥାପି ଏହି ସମୟରେ ଗଛରେ ଫଳ ଫୁଟିଥାଏ – ଆମ୍ବ, କାମୁକୋଳି ଇତ୍ୟାଦି । ବିଦ୍ୟାଳୟରେ ଗ୍ରୀଷ୍ମ ଅବକାଶ ଆସିଥାଏ, ଯାହାର ଲୋକେ ଉପଭୋଗ କରନ୍ତି । ତେଣୁ ଗ୍ରୀଷ୍ମ ଋତୁ ହେଉଛି ଚାଲେଞ୍ଜି ଏବଂ ଆନନ୍ଦ ଦୁହଁର ମିଶ୍ରଣ ।

SubQuestion No : 77

Q.77 ଅନୁଛେଦର ମୁଖ୍ୟ ବିଷୟବସ୍ତୁକୁ ଚିହ୍ନଟ କର ।

- Ans
- ☒ 1. ବର୍ଷା ଋତୁର ଉପକାର
  - ☒ 2. ଶୀତ ଋତୁର ଖାଦ୍ୟ
  - ☒ 3. ଗ୍ରୀଷ୍ମ ଋତୁର ବିବରଣୀ
  - ☒ 4. ଖେଳ କ୍ଳୁତ

Question Type :	MCQ
Question ID :	4410091190916
Option 1 ID :	4410094697963
Option 2 ID :	4410094697964
Option 3 ID :	4410094697965
Option 4 ID :	4410094697966
Status :	Answered
Chosen Option :	3



Comprehension:

ନିମ୍ନ ଅନୁଛେଦଟିକୁ ପାଠ କରି ପ୍ରଦତ୍ତ ପ୍ରଶ୍ନଗୁଡ଼ିକର ଉତ୍ତର ଲେଖ।

ଗ୍ରୀଷ୍ମ ଋତୁ ଓଡ଼ିଶାର ଏକ ଗୁରୁତ୍ୱପୂର୍ଣ୍ଣ ଋତୁ । ଏହି ଋତୁ ମାର୍ଚ୍ଚ ଶେଷରୁ ଆରମ୍ଭ ହୋଇ ଜୁନ୍ ଶେଷ ପର୍ଯ୍ୟନ୍ତ ଚାଲିଥାଏ । ଏ ସମୟରେ ସୂର୍ଯ୍ୟର ତାପମାନ ବହୁତ ବଢ଼ିଯାଏ । ଗଛଗୁଡ଼ିକ ଶୁଦ୍ଧିଯାଆନ୍ତି, ଜଳସ୍ତର କମିଯାଏ ଓ ଲୋକମାନେ ଘରୁ ବାହାରକୁ କମ୍ ବାହାରିବାକୁ ପସନ୍ଦ କରନ୍ତି । ଏହି ସମୟରେ ଲୋକେ ଜଳପାନ, ଲଘୁ, . ଓ.ଆର.ଏସ୍,ଆମ୍ବ ପଣା ଓ ବେଲ ପଣା ଭଳି ଶୀତଳ ପାନୀୟ ଖାଇଥାନ୍ତି । ଗ୍ରୀଷ୍ମରେ ଶରୀର ଜଳ ହରାଇଦେଇଥାଏ, ତେଣୁ ଅଧିକ ପାଣି ପିବା ଅତ୍ୟନ୍ତ ଆବଶ୍ୟକ । ଅଧିକ ତାପମାନ ଦେହରେ ଅସୁବିଧା ସୃଷ୍ଟି କରେ, ତେଣୁ ଏହି ସମୟରେ ହିଟ୍ ଷ୍ଟ୍ରୋକ ଭଳି ସମସ୍ୟା ଦେଖାଯାଏ । ଯଦିଓ ଏହି ଋତୁ ତାପମୟ, ତଥାପି ଏହି ସମୟରେ ଗଛରେ ଫଳ ଫୁଟିଥାଏ – ଆମ୍ବ, କାମୁକୋଳି ଇତ୍ୟାଦି । ବିଦ୍ୟାଳୟରେ ଗ୍ରୀଷ୍ମ ଅବକାଶ ଆସିଥାଏ, ଯାହାର ଲୋକେ ଉପଭୋଗ କରନ୍ତି । ତେଣୁ ଗ୍ରୀଷ୍ମ ଋତୁ ହେଉଛି ଚାଲେଞ୍ଜି ଏବଂ ଆନନ୍ଦ ଦୁହେଁର ମିଶ୍ରଣ ।

SubQuestion No : 78

Q.78 ଅନୁଛେଦରେ ଦିଆଯାଇଥିବା ତଥ୍ୟଗୁଡ଼ିକୁ ଚିହ୍ନଟ କର।


Ans ☒ 1. ଲୋକେ ଜଳପାନ ଖାନ୍ତି

☐ 2. ଲୋକେ ଅଧିକ କମ୍ ପାଣି ପିବନ୍ତି

☐ 3. ତାପମାନ କମିଯାଏ

☐ 4. ଆମ୍ବ ଗଛ ମରିଯାଏ

Question Type :	MCQ
Question ID :	4410091190917
Option 1 ID :	4410094697967
Option 2 ID :	4410094697970
Option 3 ID :	4410094697968
Option 4 ID :	4410094697969
Status :	Answered
Chosen Option :	1



Comprehension:

ନିମ୍ନ ଅନୁଛେଦଟିକୁ ପାଠ କରି ପ୍ରଦତ୍ତ ପ୍ରଶ୍ନଗୁଡ଼ିକର ଉତ୍ତର ଲେଖ।


ଗ୍ରୀଷ୍ମ ଋତୁ ଓଡ଼ିଶାର ଏକ ଗୁରୁତ୍ୱପୂର୍ଣ୍ଣ ଋତୁ । ଏହି ଋତୁ ମାର୍ଚ୍ଚ ଶେଷରୁ ଆରମ୍ଭ ହୋଇ ଜୁନ୍ ଶେଷ ପର୍ଯ୍ୟନ୍ତ ଚାଲିଥାଏ । ଏ ସମୟରେ ସୂର୍ଯ୍ୟର ତାପମାନ ବହୁତ ବଢ଼ିଯାଏ । ଗଛଗୁଡ଼ିକ ଶୁଦ୍ଧିଯାଆନ୍ତି, ଜଳସ୍ତର କମିଯାଏ ଓ ଲୋକମାନେ ଘରୁ ବାହାରକୁ କମ୍ ବାହାରିବାକୁ ପସନ୍ଦ କରନ୍ତି । ଏହି ସମୟରେ ଲୋକେ ଜଳପାନ, ଲଘୁ, ଓ.ଆର.ଏସ୍,ଆମ୍ବ ପଣା ଓ ବେଲ ପଣା ଭଳି ଶୀତଳ ପାନୀୟ ଖାଇଥାନ୍ତି । ଗ୍ରୀଷ୍ମରେ ଶରୀର ଜଳ ହରାଇଦେଇଥାଏ, ତେଣୁ ଅଧିକ ପାଣି ପିବା ଅତ୍ୟନ୍ତ ଆବଶ୍ୟକ । ଅଧିକ ତାପମାନ ଦେହରେ ଅସୁବିଧା ସୃଷ୍ଟି କରେ, ତେଣୁ ଏହି ସମୟରେ ହିଟ୍ ଷ୍ଟ୍ରୋକ ଭଳି ସମସ୍ୟା ଦେଖାଯାଏ । ଯଦିଓ ଏହି ଋତୁ ତାପମୟ, ତଥାପି ଏହି ସମୟରେ ଗଛରେ ଫଳ ଫୁଟିଥାଏ – ଆମ୍ବ, କାମୁକୋଳି ଇତ୍ୟାଦି । ବିଦ୍ୟାଳୟରେ ଗ୍ରୀଷ୍ମ ଅବକାଶ ଆସିଥାଏ, ଯାହାର ଲୋକେ ଉପଭୋଗ କରନ୍ତି । ତେଣୁ ଗ୍ରୀଷ୍ମ ଋତୁ ହେଉଛି ଚାଲେଞ୍ଜି ଏବଂ ଆନନ୍ଦ ଦୁହଁର ମିଶ୍ରଣ ।

SubQuestion No : 79

Q.79 ଅନୁଛେଦରୁ ନିଆଯାଇଥିବା ଉଦାହରଣଗୁଡ଼ିକୁ ଚିହ୍ନଟ କର।

- Ans
- ✓ 1. ଲୋକେ ଓ.ଆର.ଏସ୍ ପିଅନ୍ତି
  - ✗ 2. ତାପମାତ୍ରା କମିଯାଏ
  - ✗ 3. ଆମ୍ବ ଛାଡ଼ି ଅନ୍ୟ କୌଣସି ଫଳ ମିଳେ ନାହିଁ
  - ✗ 4. ଜଳ ଦେଇ ନାହାଁନ୍ତି

Question Type :	MCQ
Question ID :	4410091190918
Option 1 ID :	4410094697973
Option 2 ID :	4410094697971
Option 3 ID :	4410094697974
Option 4 ID :	4410094697972
Status :	Answered
Chosen Option :	1



Comprehension:

ନିମ୍ନ ଅନୁଛେଦଟିକୁ ପାଠ କରି ପ୍ରଦତ୍ତ ପ୍ରଶ୍ନଗୁଡ଼ିକର ଉତ୍ତର ଲେଖ।

ଗ୍ରୀଷ୍ମ ଋତୁ ଓଡ଼ିଶାର ଏକ ଗୁରୁତ୍ୱପୂର୍ଣ୍ଣ ଋତୁ । ଏହି ଋତୁ ମାର୍ଚ୍ଚ ଶେଷରୁ ଆରମ୍ଭ ହୋଇ ଜୁନ୍ ଶେଷ ପର୍ଯ୍ୟନ୍ତ ଚାଲିଥାଏ । ଏ ସମୟରେ ସୂର୍ଯ୍ୟର ତାପମାନ ବହୁତ ବଢ଼ିଯାଏ । ଗଛଗୁଡ଼ିକ ଶୁଦ୍ଧିଯାଆନ୍ତି, ଜଳସ୍ତର କମିଯାଏ ଓ ଲୋକମାନେ ଘରୁ ବାହାରକୁ କମ୍ ବାହାରିବାକୁ ପସନ୍ଦ କରନ୍ତି । ଏହି ସମୟରେ ଲୋକେ ଜଳପାନ, ଲଘୁ, . ଓ.ଆର.ଏସ୍,ଆମ୍ବ ପଣା ଓ ବେଲ ପଣା ଭଳି ଶୀତଳ ପାନୀୟ ଖାଇଥାନ୍ତି । ଗ୍ରୀଷ୍ମରେ ଶରୀର ଜଳ ହରାଇଦେଇଥାଏ, ତେଣୁ ଅଧିକ ପାଣି ପିବା ଅତ୍ୟନ୍ତ ଆବଶ୍ୟକ । ଅଧିକ ତାପମାନ ଦେହରେ ଅସୁବିଧା ସୃଷ୍ଟି କରେ, ତେଣୁ ଏହି ସମୟରେ ହିଟ୍ ଷ୍ଟୋକ ଭଳି ସମସ୍ୟା ଦେଖାଯାଏ । ଯଦିଓ ଏହି ଋତୁ ତାପମୟ, ତଥାପି ଏହି ସମୟରେ ଗଛରେ ଫଳ ଫୁଟିଥାଏ – ଆମ୍ବ, କାମୁକୋଳି ଇତ୍ୟାଦି । ବିଦ୍ୟାଳୟରେ ଗ୍ରୀଷ୍ମ ଅବକାଶ ଆସିଥାଏ, ଯାହାର ଲୋକେ ଉପଭୋଗ କରନ୍ତି । ତେଣୁ ଗ୍ରୀଷ୍ମ ଋତୁ ହେଉଛି ଚାଲେଞ୍ଜି ଏବଂ ଆନନ୍ଦ ଦୁହଁର ମିଶ୍ରଣ ।

SubQuestion No : 80

Q.80 ଅନ୍ୟାନ୍ୟ ଉଦାହରଣରେ ‘ତାପମାତ୍ରା’ ଶବ୍ଦର ସଠିକ୍ ବ୍ୟବହାର କର ।

- Ans
- ☒ 1. ମୁଁ ତାପମାତ୍ରାକୁ ବଜାରରେ କିଣିଛି ।
  - ☒ 2. ଏହି ଘରର ତାପମାତ୍ରା ବହୁତ ଉଚ୍ଚ ଅଛି ।
  - ☒ 3. ତାପମାତ୍ରା ଏକ ମିଠା ଖାଦ୍ୟ ଅଟେ ।
  - ☒ 4. ତାପମାତ୍ରା ଖେଳିବାକୁ ବହୁତ ଭଲ ଲାଗେ ।

Question Type : MCQ  
Question ID : 4410091190919  
Option 1 ID : 4410094697978  
Option 2 ID : 4410094697976  
Option 3 ID : 4410094697977  
Option 4 ID : 4410094697975  
Status : Answered  
Chosen Option : 2

Section : Logical Reasoning

Q.81 Based on the English alphabetical order, three of the following four letter-cluster pairs are alike in a certain way and thus form a group. Which is the letter-cluster pair that DOES NOT belong to that group?

(Note: The odd one out is not based on the number of consonants/vowels or their position in the letter-cluster.)

- Ans
- ☒ 1. KL-OP
  - ☒ 2. VW-ZA
  - ☒ 3. CD-GH
  - ☒ 4. MN-PT

Question Type : MCQ  
Question ID : 441009811723  
Option 1 ID : 4410093201018  
Option 2 ID : 4410093201016  
Option 3 ID : 4410093201017  
Option 4 ID : 4410093201015  
Status : Answered  
Chosen Option : 4

Q.82 Select the pair which follows the same pattern as that followed by the two pairs given below. Both pairs follow the same pattern.  
ABC : CBA  
XYZ : ZYX

- Ans ☒ 1. MIL : ILM
- ☒ 2. DEF : EFD
- ☒ 3. MNO : ONM
- ☒ 4. GHI : HIG

Question Type :	MCQ
Question ID :	441009819013
Option 1 ID :	4410093230178
Option 2 ID :	4410093230176
Option 3 ID :	4410093230177
Option 4 ID :	4410093230175
Status :	Answered
Chosen Option :	3

Q.83 Seven people, I, J, K, Q, R, S and T, are sitting around a circular table facing the centre of the table. R sits to the immediate right of K. S sits to the immediate left of T. T sits second to the left of Q. I sits third to the left of R. Who sits fourth to the left of J?

- Ans ☒ 1. S
- ☒ 2. I
- ☒ 3. Q
- ☒ 4. T

Question Type :	MCQ
Question ID :	441009819332
Option 1 ID :	4410093231454
Option 2 ID :	4410093231452
Option 3 ID :	4410093231451
Option 4 ID :	4410093231453
Status :	Answered
Chosen Option :	1

Q.84

Each of P, Q, R, S, T, U and V has an exam on a different day of a week starting from Monday and ending on Sunday of the same week. T has an exam on Friday. Exactly 3 people have an exam between R and V, neither of whom has on exam on Sunday. S has an exam immediately after Q. U has an exam immediately before V. How many people have exams before T?

Ans

✖ 1. 2

✖ 2. 5

✖ 3. 3

✔ 4. 4

Question Type :

MCQ

Question ID :

4410091189885

Option 1 ID :

4410094693687

Option 2 ID :

4410094693690

Option 3 ID :

4410094693688

Option 4 ID :

4410094693689

Status :

Answered

Chosen Option :

4

Q.85

What should come in place of the question mark (?) in the given series based on the English alphabetical order?  
  
OKI TPN YUS DZX ?

Ans

✖ 1. ICE

✔ 2. IEC

✖ 3. IFR

✖ 4. IDE

Question Type :

MCQ

Question ID :

4410091229904

Option 1 ID :

4410094853093

Option 2 ID :

4410094853092

Option 3 ID :

4410094853095

Option 4 ID :

4410094853094

Status :

Answered

Chosen Option :

2

Q.86	What will come in the place of the question mark (?) in the following equation, if '+' and '-' are interchanged and 'x' and '÷' are interchanged?  $10 \times 2 \div 7 - 8 + 1 = ?$
Ans	<div><div>✓ 1. 42</div><div>✗ 2. 40</div><div>✗ 3. 43</div><div>✗ 4. 41</div></div>

Question Type :	MCQ
Question ID :	4410091227391
Option 1 ID :	4410094843061
Option 2 ID :	4410094843059
Option 3 ID :	4410094843062
Option 4 ID :	4410094843060
Status :	Answered
Chosen Option :	1

Q.87	Each of A, B, C, D, E, F and G has an exam on a different day of a week starting from Monday and ending on Sunday of the same week. No one has an exam before D. Exactly 4 people have an exam between A and B. Exactly 3 people have an exam between C and D. F has an exam immediately before G. E has an exam after A.  How many people have exams after E?
Ans	<div><div>✗ 1. 4</div><div>✓ 2. 1</div><div>✗ 3. 3</div><div>✗ 4. 2</div></div>

Question Type :	MCQ
Question ID :	4410091189911
Option 1 ID :	4410094693794
Option 2 ID :	4410094693791
Option 3 ID :	4410094693793
Option 4 ID :	4410094693792
Status :	Answered
Chosen Option :	1



Q.88	If 'S' stands for '-', 'T' stands for 'x', 'U' stands for '÷' and 'V' stands for '+', then what will come in place of the question mark (?) in the following equation? 16 U 8 V 5 S 3 T 1 = ?
Ans	<div><div>✖</div>1. -2</div>
	<div><div>✔</div>2. 4</div>
	<div><div>✖</div>3. 7</div>
	<div><div>✖</div>4. 8</div>

Question Type :	MCQ
Question ID :	4410091248060
Option 1 ID :	4410094925419
Option 2 ID :	4410094925420
Option 3 ID :	4410094925421
Option 4 ID :	4410094925422
Status :	Answered
Chosen Option :	2

Q.89	Seven people, I, J, K, Q, R, S and T are sitting in a straight line facing north. Only five people sit between T and K. J sits to the immediate left of K. Only two people sit between K and Q. S sits at some place to the left of I but at some place to the right of R. How many people sit between S and K?
Ans	<div><div>✖</div>1. Two</div>
	<div><div>✖</div>2. Four</div>
	<div><div>✖</div>3. One</div>
	<div><div>✔</div>4. Three</div>

Question Type :	MCQ
Question ID :	441009810108
Option 1 ID :	4410093194557
Option 2 ID :	4410093194555
Option 3 ID :	4410093194558
Option 4 ID :	4410093194556
Status :	Answered
Chosen Option :	3

Q.90	A is the daughter of B. B is the wife of C. D is the mother of E. D is the sister of C. How is A related to E?
Ans	<div><div><div>✖</div><div>1. Daughter</div></div></div>
	<div><div><div>✖</div><div>2. Mother</div></div></div>
	<div><div><div>✔</div><div>3. Mother's brother's daughter</div></div></div>
	<div><div><div>✖</div><div>4. Mother's brother's wife</div></div></div>

Question Type :	MCQ
Question ID :	4410091230549
Option 1 ID :	4410094855693
Option 2 ID :	4410094855692
Option 3 ID :	4410094855690
Option 4 ID :	4410094855691
Status :	Answered
Chosen Option :	3

Q.91	What should come in place of the question mark (?) in the given series? 97 109 124 142 163 ?
Ans	<div><div><div>✖</div><div>1. 185</div></div></div>
	<div><div><div>✔</div><div>2. 187</div></div></div>
	<div><div><div>✖</div><div>3. 181</div></div></div>
	<div><div><div>✖</div><div>4. 179</div></div></div>

Question Type :	MCQ
Question ID :	4410091241796
Option 1 ID :	4410094900530
Option 2 ID :	4410094900531
Option 3 ID :	4410094900529
Option 4 ID :	4410094900528
Status :	Answered
Chosen Option :	2

Q.92 J is the sister of D. D is the son of B. B is the father of F. F is the daughter of Z. How is J related to Z?

- Ans 

✔ 1. Daughter
- ✖ 2. Son's daughter
- ✖ 3. Sister
- ✖ 4. Daughter's daughter

Question Type :	MCQ
Question ID :	4410091246215
Option 1 ID :	4410094918134
Option 2 ID :	4410094918137
Option 3 ID :	4410094918135
Option 4 ID :	4410094918136
Status :	Answered
Chosen Option :	1

Q.93 In a certain code language,  
'A + B' means 'A is the mother of B',  
'A - B' means 'A is the brother of B',  
'A x B' means 'A is the wife of B',  
'A % B' means 'A is the father of B' and  
'A # B' means 'A is the daughter of B'.  
How is L related to N if 'P % L - C # K # N'?

- Ans 

✖ 1. Daughter's husband
- ✔ 2. Daughter's son
- ✖ 3. Wife's mother
- ✖ 4. Daughter's daughter

Question Type :	MCQ
Question ID :	4410091242630
Option 1 ID :	4410094903874
Option 2 ID :	4410094903873
Option 3 ID :	4410094903872
Option 4 ID :	4410094903871
Status :	Not Answered
Chosen Option :	--

Q.94

Read the given statements and conclusions carefully. Assuming that the information given in the statements is true, even if it appears to be at variance with commonly known facts, decide which of the given conclusions logically follow(s) from the statements.

Statements:  
All oranges are bananas.  
All bananas are grapes.

Conclusions:  
(I) All oranges are grapes.  
(II) Some grapes are bananas.

Ans

✖ 1. Only conclusion (I) follows.

✖ 2. Neither conclusion (I) nor (II) follows.

✖ 3. Only conclusion (II) follows.

✔ 4. Both conclusions (I) and (II) follow.

Question Type : MCQ

Question ID : 4410091189917

Option 1 ID : 4410094693818

Option 2 ID : 4410094693816

Option 3 ID : 4410094693817

Option 4 ID : 4410094693815

Status : Answered

Chosen Option : 4

Q.95

Refer to the given series and answer the question that follows (all numbers are single digit numbers only). Counting is to be done from left to right only.

(Left) 3 6 8 5 6 4 5 6 5 1 4 5 2 2 7 9 2 9 3 6 2 2 2 7 9 4 1 (Right)

How many such even numbers are there, each of which is immediately preceded by an odd number and also immediately followed by an odd number?

Ans

✖ 1. 6

✖ 2. 5

✔ 3. 4

✖ 4. 3

Question Type : MCQ

Question ID : 441009811697

Option 1 ID : 4410093200914

Option 2 ID : 4410093200912

Option 3 ID : 4410093200911

Option 4 ID : 4410093200913

Status : Answered

Chosen Option : 3

Q.96

Based on the English alphabetical order, three of the following four letter-clusters are alike in a certain way and thus form a group. Which letter-cluster DOES NOT belong to that group?  
(Note: The odd one out is not based on the number of consonants/vowels or their position in the letter-cluster.)

Ans

✗ 1. IHF

✗ 2. EDB

✗ 3. BAY

✓ 4. ZZW

Question Type :

MCQ

Question ID :

441009818952

Option 1 ID :

4410093229934

Option 2 ID :

4410093229932

Option 3 ID :

4410093229933

Option 4 ID :

4410093229931

Status :

Answered

Chosen Option :

4

Q.97

This question is based on the following words.  
  
BEN JUN FEB POS  
  
In each of the words, each vowel is changed to the letter immediately following it in the English alphabetical order and each consonant is changed to the letter immediately preceding it in the English alphabetical order. In how many letter-clusters thus formed, will no vowel appear?

Ans

✗ 1. Two

✗ 2. One

✓ 3. Zero

✗ 4. Three

Question Type :

MCQ

Question ID :

441009819468

Option 1 ID :

4410093231997

Option 2 ID :

4410093231996

Option 3 ID :

4410093231995

Option 4 ID :

4410093231998

Status :

Answered

Chosen Option :

2

Q.98

Refer to the given letter series and answer the question that follows. Counting to be done from left to right only. All numbers are single-digit numbers.  
(Left) Z I N X D F P W G T N C T D K T L D X B O (Right)  
How many such consonants are there each of which is immediately preceded by a vowel and also immediately followed by a consonant?

Ans

✔ 1. One

✘ 2. None

✘ 3. Three

✘ 4. Two

Question Type :

MCQ

Question ID :

441009819710

Option 1 ID :

4410093232964

Option 2 ID :

4410093232963

Option 3 ID :

4410093232966

Option 4 ID :

4410093232965

Status :

Answered

Chosen Option :

1

Q.99

Refer to the following letter series and answer the question that follows. Counting to be done from left to right only.  
  
(Left) E S H M T Y W F G K R D S Z L B I O C U X A P (Right)  
  
How many letters are there in the English alphabetical series between the letter which is sixth from the right end and fourth from the left end of the series?

Ans

✔ 1. One

✘ 2. Three

✘ 3. Five

✘ 4. Four

Question Type :

MCQ

Question ID :

4410091242657

Option 1 ID :

4410094903976

Option 2 ID :

4410094903975

Option 3 ID :

4410094903977

Option 4 ID :

4410094903978

Status :

Not Answered

Chosen Option :

--

Q.100 What will come in the place of the question mark (?) in the following equation, if '+' and '-' are interchanged and 'x' and '÷' are interchanged?  
 $20 + 50 \times 5 - 12 \div 13 = ?$

- Ans
1. 163

2. 164

3. 166

4. 165

Question Type :	MCQ
Question ID :	4410091225689
Option 1 ID :	4410094836256
Option 2 ID :	4410094836257
Option 3 ID :	4410094836259
Option 4 ID :	4410094836258
Status :	Answered
Chosen Option :	3

