

Delhi Police Constable

**Previous Year Paper
Driver (Male) 21 Oct 2022
Shift 2**



Adda247

Test Prime

ALL EXAMS, ONE SUBSCRIPTION



1,00,000+
Mock Tests



**Personalised
Report Card**



**Unlimited
Re-Attempt**



600+
Exam Covered



25,000+ Previous
Year Papers



500%
Refund



ATTEMPT FREE MOCK NOW

Exam Date	21/10/2022
Exam Time	1:00 PM - 2:30 PM
Subject	Constable Driver Male in Delhi Police Examination 2022

Section : Part-A-General Awareness

Q.1 What is included in the Capital Account of the Government?

- Ans
- ☒ 1. Revenue of the Government
 - ☒ 2. Assets and Liabilities of the Government
 - ☐ 3. Assets and Liabilities of the Private Sector
 - ☐ 4. Revenue of the Private Sector

Question ID : 26433054560
Status : Answered
Chosen Option : 1

Q.2 In October 2021, the Ministry of Social Justice and Empowerment launched a platform providing reemployment opportunities for senior citizens on the occasion of International Day of Elder Persons 2021. What is the name of one of the portals?

- Ans
- ☒ 1. SACRED
 - ☐ 2. SAKAR
 - ☐ 3. SAMADHAN
 - ☐ 4. SAMRIDH

Question ID : 26433069806
Status : Not Answered
Chosen Option : --

Q.3 Which is the correct order of money evolution?

- Ans
- ☒ 1. Commodity Money, Metal Money, Paper Money, Credit Money
 - ☐ 2. Paper Money, Credit Money, Metal Money, Commodity Money
 - ☐ 3. Credit Money, Paper Money, Commodity Money, Metal Money
 - ☐ 4. Metal Money, Paper Money, Credit Money, Commodity Money

Question ID : 26433065423
Status : Answered
Chosen Option : 1

Q.4 Who was appointed as India's first Minister of Cooperation?

- Ans
- ☒ 1. Amit Shah
 - ☐ 2. Rajnath Singh
 - ☐ 3. Dharmendra Pradhan
 - ☐ 4. Nirmala Sitharaman

Question ID : 26433074170
Status : Answered
Chosen Option : 3

Q.5 Which of the following pairs is NOT correctly matched?

- Ans ☒ 1. Education Town – Puri
☒ 2. Tourist Town - Jaisalmer
☒ 3. Religious Town – Ayodhya
☒ 4. Cantonment Town - Babina

Question ID : 26433054973
Status : Answered
Chosen Option : 1

Q.6 On which day was National Mourning Day observed in protest against the partition of Bengal?

- Ans ☒ 1. 16 October 1905
☒ 2. 19 November 1905
☒ 3. 19 July 1905
☒ 4. 16 August 1905

Question ID : 26433082254
Status : Answered
Chosen Option : 1

Q.7 India's first intranasal Covid vaccine is introduced by which of the following companies?

- Ans ☒ 1. Cadila Pharmaceuticals
☒ 2. Bharat Biotech
☒ 3. Cipla Limited
☒ 4. Serum Institute of India

Question ID : 26433098113
Status : Not Answered
Chosen Option : --

Q.8 How many Fundamental Rights are given under the Constitution of India?

- Ans ☒ 1. 7
☒ 2. 8
☒ 3. 5
☒ 4. 6

Question ID : 26433054080
Status : Marked For Review
Chosen Option : 4

Q.9 Choose the INCORRECT pair from the following options.

- Ans ☒ 1. Fourth Five-Year Plan - Indo-Pak War
☒ 2. Fifth Five-Year Plan - Garibi Hatao
☒ 3. Sixth Five-Year Plan - Nationalisation of 14 banks
☒ 4. Seventh Five-Year Plan - first time private sector got priority

Question ID : 26433054597
Status : Answered
Chosen Option : 3

Q.10 The 'Charbagh' designs are a part of which of the following architectural styles?

Ans ☒ 1. Persian

☐ 2. Dravida

☐ 3. Nagara

☐ 4. Vesara

Question ID : 26433054165

Status : Answered

Chosen Option : 1

Q.11 In July 2021, who among the following resigned as the Union Social Justice and Empowerment Minister to join as the Governor of Karnataka?

Ans ☐ 1. Mangubhai Chhaganbhai Patel

☒ 2. Thawarchand Gelhot

☐ 3. PS Sreedharan Pillai

☐ 4. Satyadev Narayan Arya

Question ID : 26433074171

Status : Answered

Chosen Option : 1

Q.12 The 'Desert Festival' takes place annually at _____ in Rajasthan.

Ans ☐ 1. Jaipur

☒ 2. Jaisalmer

☐ 3. Kota

☐ 4. Bikaner

Question ID : 26433054143

Status : Answered

Chosen Option : 2

Q.13 As per the 2011 census, which of the following Union Territories had the lowest population density?

Ans ☐ 1. Dadra and Nagar Haveli

☒ 2. Andaman and Nicobar Islands

☐ 3. Lakshadweep

☐ 4. Daman and Diu

Question ID : 26433065398

Status : Answered

Chosen Option : 2

Q.14 Which medicinal plant found in India is used for the treatment of blood pressure?

Ans ☐ 1. Mint

☐ 2. Tulsi

☐ 3. Aloe vera

☒ 4. Sarpagandha

Question ID : 26433071598

Status : Answered

Chosen Option : 4

Q.15 In February 2022, who among the following won the women's 52 kg final at the 73rd Strandja Memorial Boxing Tournament?

- Ans
- ☐ 1. Kavita Chahal
 - ☒ 2. Nikhat Zareen
 - ☐ 3. Simranjit Kaur
 - ☐ 4. Pooja Rani

Question ID : 26433054448

Status : Marked For Review

Chosen Option : 2

Q.16 In which of the following years, India adopted the Infant Milk Substitutes, Feeding Bottles, and Infant Foods (IMS) Act?

- Ans
- ☒ 1. 1992
 - ☐ 2. 1990
 - ☐ 3. 1989
 - ☐ 4. 1991

Question ID : 26433098115

Status : Not Answered

Chosen Option : --

Q.17 Which of the following is an example of a rock-cut temple?

- Ans
- ☒ 1. Kailash temple, Ellora
 - ☐ 2. Vishwanath temple, Banaras
 - ☐ 3. Kamakhya temple, Guwahati
 - ☐ 4. Somnath temple, Gujarat

Question ID : 26433054168

Status : Answered

Chosen Option : 1

Q.18 The Sultan who was also known as 'Lakh Baksh' is:

- Ans
- ☐ 1. Muhammad bin Tughlaq
 - ☐ 2. Iltutmish
 - ☒ 3. Qutbuddin Aibak
 - ☐ 4. Ghiasuddin Tughlaq

Question ID : 26433081940

Status : Not Attempted and
Marked For Review

Chosen Option : --

Q.19 The High Court and Supreme Court Judges (Salaries and Conditions of Service) Amendment Bill, 2021, was introduced in the Lok Sabha on _____.

- Ans
- ☐ 1. 5 December 2021
 - ☐ 2. 13 December 2021
 - ☐ 3. 8 December 2021
 - ☒ 4. 30 November 2021

Question ID : 26433061833

Status : Not Answered

Chosen Option : --

Q.20 Odissi dance in its rudimentary form was performed as a part of temple service by which of the following?

- Ans ☒ 1. Nritya
☒ 2. Maharis
☒ 3. Nartakis
☒ 4. Dasi

Question ID : 26433070814
Status : Marked For Review
Chosen Option : 2

Section : Part-B-General Intelligence

Q.1 'A % B' means 'A is the father of B'.
'A @ B' means 'A is the brother of B'.
'A & B' means 'A is the daughter of B'.
'A # B' means 'A is the mother of B'.
If E @ M # N % Q @ R & P, then how is N related to P?

- Ans ☒ 1. Son
☒ 2. Wife
☒ 3. Husband
☒ 4. Son-in-law

Question ID : 26433068264
Status : Answered
Chosen Option : 3

Q.2 Which of the option figures is the exact mirror image of the given problem figure when the mirror is held at the right side?

Problem figure:



Ans

- ☒ 1.
- ☒ 2.
- ☒ 3.
- ☒ 4.

Question ID : 26433057391
Status : Answered
Chosen Option : 4

Q.3 Which of the following numbers will replace the question mark (?) in the given series?
15, 20, 17, 22, 19, 24, ?

- Ans
- ☐ 1. 20
 - ☐ 2. 23
 - ☐ 3. 25
 - ☒ 4. 21

Question ID : 26433056427

Status : Answered

Chosen Option : 4

Q.4 Select the set in which the numbers are related in the same way as are the numbers of the given sets.

(NOTE : Operations should be performed on the whole numbers, without breaking down the numbers into its constituent digits. E.g. 13 – Operations on 13 such as adding /deleting /multiplying etc. to 13 can be performed. Breaking down 13 into 1 and 3 and then performing mathematical operations on 1 and 3 is not allowed.)
(29, 52, 16)
(35, 44, 24)

- Ans
- ☐ 1. (28, 35, 15)
 - ☐ 2. (30, 66, 16)
 - ☒ 3. (32, 84, 11)
 - ☐ 4. (34, 60, 21)

Question ID : 26433057087

Status : Answered

Chosen Option : 3

Q.5 A # B means 'A is the sister of B'.

A @ B means 'A is the son of B'.

A & B means 'A is the husband of B'.

A % B means 'A is the wife of B'.

If G & H # I % J @ K & L, then how is I related to L?

- Ans
- ☐ 1. Mother-in-law
 - ☐ 2. Daughter
 - ☒ 3. Daughter-in-law
 - ☐ 4. Granddaughter

Question ID : 26433097141

Status : Answered

Chosen Option : 3

Q.6 Select the option in which the given figure is embedded (Rotation is NOT allowed).

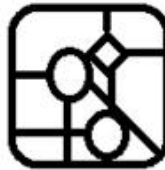


Ans

✗ 1.



✓ 2.



✗ 3.



✗ 4.




Question ID : 26433055963

Status : Answered

Chosen Option : 2

Q.7 Select the figure that will replace the question mark (?) in the given figure series.



Ans

- ✗ 1.

^ ^ ^

V V

V V V
- ✗ 2.

^ ^ ^

V V

^ ^ ^
- ✗ 3.

V V V

^ ^

^ ^ ^
- ✓ 4.

V V V

^ ^

^ ^ V

Question ID : 26433056596
Status : Answered
Chosen Option : 4

Q.8 Select the correct combination of mathematical signs to sequentially replace the * signs and to balance the given equation.
 $14 * 15 * 5 * 7 * 2 = 47$

- ✓ 1.

$\times \div + -$
- ✗ 2.

$- \times \div +$
- ✗ 3.

$+ - \times \div$
- ✗ 4.

$\div - + \times$

Question ID : 26433057476
Status : Answered
Chosen Option : 1

Q.9 In a certain code language, 'FIG' is written as '9' and 'PEAR' is written as '12'.How will 'ALMOND' be written in that language?

- ✓ 1.

18
- ✗ 2.

22
- ✗ 3.

16
- ✗ 4.

12

Question ID : 26433097145
Status : Answered
Chosen Option : 1

Q.10 Based on the position in the English alphabetical order, three of the following letter-clusters are alike in some manner and one is different. Select the odd letter-cluster.

- Ans ☒ 1. SUWY
☒ 2. JMOP
☒ 3. NQST
☒ 4. TWYZ

Question ID : 26433097137
 Status : Answered
 Chosen Option : 1

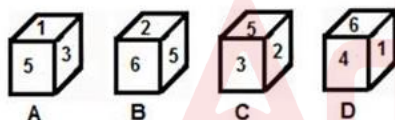
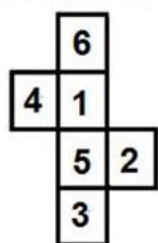
Q.11 Select the option that is related to the fifth letter-cluster in the same way as the second letter-cluster is related to the first letter-cluster and the fourth letter-cluster is related to the third letter-cluster.

EXISTENCE : SIXETECNE :: DIFFERENT : FFIDETNER :: INVENTIVE : ?

- Ans ☒ 1. VEINNEVIT
☒ 2. EVNINEVIT
☒ 3. ENVINVETI
☒ 4. VENINEIVT

Question ID : 26433097152
 Status : Answered
 Chosen Option : 2

Q.12 If the given sheet is folded to form a cube, which of the following figures are possible?



- Ans ☒ 1. Only A, C and D
☒ 2. Only C and D
☒ 3. Only A and C
☒ 4. Only B and C

Question ID : 26433059909
 Status : Answered
 Chosen Option : 2

Q.13 The second number in the given number pairs is obtained by performing certain mathematical operation(s) on the first number. The same operation(s) are followed in all the number pairs except one. Find that odd number pair.

- Ans ☒ 1. 44 : 22
☒ 2. 16 : 8
☒ 3. 32 : 16
☒ 4. 20 : 4

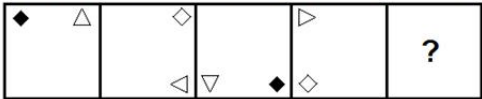
Question ID : 26433057461
 Status : Answered
 Chosen Option : 4

Q.14 In a certain code language, 'TEA' is written as '78', and 'WATER' is written as '335'.
How will 'MILK' be written in that language?

- Ans
- 1. 184
 - 2. 188
 - 3. 172
 - 4. 180

Question ID : 26433055706
Status : Answered
Chosen Option : 4

Q.15 Select the figure from among the given options that can replace the question mark (?) in the following series.



Ans

- 1.
- 2.
- 3.
- 4.

Question ID : 26433055945
Status : Answered
Chosen Option : 4

Q.16 Select the number from among the given options that can replace the question mark (?) in the following series.
222, 223, 214, ?, 190, 271

- Ans
- 1. 230
 - 2. 242
 - 3. 234
 - 4. 239

Question ID : 26433057057
Status : Not Attempted and Marked For Review
Chosen Option : --

Q.17 Select the set in which the numbers are related in the same way as are the numbers of the given sets.

(NOTE : Operations should be performed on the whole numbers, without breaking down the numbers into its constituent digits. E.g. 13 – Operations on 13 such as adding /deleting /multiplying etc. to 13 can be performed. Breaking down 13 into 1 and 3 and then performing mathematical operations on 1 and 3 is NOT allowed)
(225, 570, 361)
(121, 462, 441)

- Ans
- ☒ 1. (169, 143, 484)
 - ☒ 2. (81, 207, 529)
 - ☒ 3. (49, 70, 100)
 - ☒ 4. (64, 272, 289)

Question ID : 26433056497

Status : Not Answered

Chosen Option : --

Q.18 Three statements are given followed by three conclusions numbered I, II and III.

Assuming the statements to be true, even if they seem to be at variance with commonly known facts, decide which of the conclusions logically follow(s) from the statements.

Statements:

Some strawberries are oranges.

Some strawberries are mangoes.

All mangoes are peaches.

Conclusions:

I. Some peaches are mangoes.

II. Some peaches are orange.

III. Some peaches are strawberries.

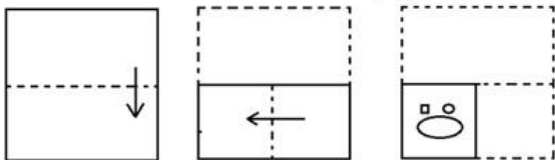
- Ans
- ☒ 1. Only conclusions I and III follow
 - ☒ 2. Only conclusions II and III follow
 - ☒ 3. Only conclusions I and II follow
 - ☒ 4. All conclusions follow

Question ID : 26433068646

Status : Answered

Chosen Option : 1

Q.19 The sequence of folding a piece of paper and the manner in which the folded paper has been cut is shown below. Choose the figure that would most closely resemble the unfolded form of the paper.



Ans

- ✗ 1.
- ✗ 2.
- ✗ 3.
- ✓ 4.

Question ID : 26433067451
Status : Answered
Chosen Option : 4

Q.20 Which two signs and numbers need to be interchanged to make the following equation correct?

$$(7)^2 - (56 \div 8) + (9 \times 6) = 18$$

- Ans
- ✗ 1.

8 and 6, + and +
- ✗ 2.

7 and 6, + and -
- ✗ 3.

7 and 9, - and +
- ✓ 4.

7 and 8, - and +

Question ID : 26433057109
Status : Answered
Chosen Option : 4

Q.1 Average of four consecutive odd numbers A, B, C and D is 14. What will be the product of A and D?

- Ans
- ☐ 1. 143
 - ☐ 2. 195
 - ☐ 3. 165
 - ☒ 4. 187

Question ID : 26433074262

Status : Answered

Chosen Option : 4

Q.2 A diamond necklace is sold for Rs.26,650 at a loss of 18%. What is the cost price of the diamond necklace?

- Ans
- ☐ 1. Rs.30,500
 - ☐ 2. Rs.31,500
 - ☐ 3. Rs.34,500
 - ☒ 4. Rs.32,500

Question ID : 26433063692

Status : Answered

Chosen Option : 4

Q.3 A can do a piece of work in 7 days of 9 hours each, whereas B can do same work in 6 days of 7 hours each. How long will they take to do the work together, working $4\frac{1}{5}$ hours a day?

- Ans
- ☐ 1. 4 days
 - ☐ 2. 5 days
 - ☐ 3. 2 days
 - ☒ 4. 6 days

Question ID : 26433063900

Status : Not Answered

Chosen Option : --

Q.4 The monthly income of Mukesh is Rs.75,000. If his income is increased by 29%, then what will be his new monthly income?

- Ans
- ☐ 1. Rs.82,230
 - ☐ 2. Rs.79,750
 - ☐ 3. Rs.96,230
 - ☒ 4. Rs.96,750

Question ID : 26433063680

Status : Answered

Chosen Option : 4

Q.5 A household appliances store owner allows two successive discounts of 10% and 20% on each item. As an incentive, if the net payment after the discounts is above Rs.20,000, the customer gets an additional discount of 10% on the discounted price. How much does a customer pay (in Rs.) if his bill is for Rs.30,000?

- Ans
- ☐ 1. 23,080
 - ☒ 2. 19,440
 - ☐ 3. 20,250
 - ☐ 4. 17,430

Question ID : 26433063213

Status : Answered

Chosen Option : 2

Q.6 The fourth proportional to 27,108 and 165 is:

- Ans
- ☒ 1. 360
 - ☒ 2. 460
 - ☒ 3. 660
 - ☒ 4. 560

Question ID : 26433061384
Status : Answered
Chosen Option : 3

Q.7 The sum of two numbers is 60, and their HCF and LCM are 5 and 175, respectively. The sum of the reciprocals of the two numbers is:

- Ans
- ☒ 1. $\frac{12}{175}$
 - ☒ 2. $\frac{7}{175}$
 - ☒ 3. $\frac{175}{12}$
 - ☒ 4. $\frac{5}{175}$

Question ID : 26433063996
Status : Answered
Chosen Option : 1

Q.8 The dimensions of a piece of iron in the shape of a cuboid are 256 cm × 135 cm × 50 cm. If it is melted and recast into a cube, find the surface area of the cube.

- Ans
- ☒ 1. 68,600 cm²
 - ☒ 2. 68,400 cm²
 - ☒ 3. 86,400 cm²
 - ☒ 4. 84,600 cm²

Question ID : 26433071277
Status : Not Answered
Chosen Option : --

Q.9 The difference between the simple interest and compound interest on a certain sum of money for 2 years at 20% interest per annum is ₹964. What is the sum (in ₹)?

- Ans
- ☒ 1. 24,100
 - ☒ 2. 19,600
 - ☒ 3. 24,000
 - ☒ 4. 19,200

Question ID : 26433061906
Status : Answered
Chosen Option : 1

Q.10 Sita, Geeta and Reeta decide to race a distance of y m. Reeta completes the race 28 m ahead of Sita. Geeta completes the race 40 m ahead of Reeta and 64 m ahead of Sita. What is the value of y ?

- Ans
- ☐ 1. 260 m
 - ☐ 2. 320 m
 - ☐ 3. 300 m
 - ☒ 4. 280 m

Question ID : 26433061686
Status : Not Answered
Chosen Option : --

Section : Part-D-Road Sense, Vehicle Maintenance, Traffic Rules/Signals Vehicle and Environmental Pollution

Q.1 You should not overtake _____.

- Ans
- ☐ 1. when there is no signal to overtake from the vehicle ahead
 - ☐ 2. when the road ahead is visible
 - ☐ 3. when you cannot see vehicles comes from the other side
 - ☒ 4. when the road ahead is not visible

Question ID : 26433097939
Status : Marked For Review
Chosen Option : 1

Q.2 When school buses are stopped for picking up or setting down students?

- Ans
- ☒ 1. Proceed slowly and cautiously since there is chance of students suddenly crossing the road
 - ☐ 2. No special care is required
 - ☐ 3. Blow horn and proceed
 - ☐ 4. Move fast

Question ID : 26433097946
Status : Answered
Chosen Option : 1

Q.3 What is the full form of MPFI?

- Ans
- ☐ 1. Multi-Port Fuel Injection System
 - ☒ 2. Multi Point Fuel Injection System
 - ☐ 3. Multi-Port Fuel Ignition System
 - ☐ 4. Multi Point Fuel Ignition System

Question ID : 26433098082
Status : Marked For Review
Chosen Option : 2

Q.4 Instant combustion of the fuel in the combustion chamber produces a sudden rise of pressure in the cylinder and the shock goes to the bearings through the piston, gudgeon pin and the _____. This shock is then absorbed by the layer of oil present in the main bearings.

Ans ☒ 1. connecting rod

☒ 2. camshaft

☒ 3. flywheel

☒ 4. crankshaft

Question ID : 26433098024

Status : Answered

Chosen Option : 1

Q.5 When your vehicle skid while driving you should?

Ans ☒ 1.

Turn the steering wheel when in the direction of the car is skidding

☒ 2. Put on the brake first

☒ 3. Accelerate vehicle

☒ 4. Do nothing

Question ID : 26433097944

Status : Answered

Chosen Option : 2

Q.6 You want to overtake a vehicle near a hospital.

Ans ☒ 1. You will not blow horn.

☒ 2. You cannot overtake a vehicle near a hospital.

☒ 3. You will Blow the horn continuously.

☒ 4. You will blow the horn only intermittently.

Question ID : 26433097945

Status : Marked For Review

Chosen Option : 1

Q.7 Which of the following is a part of the starting system of electric system of a vehicle?

Ans ☒ 1. Fog Lamps

☒ 2. Battery

☒ 3. Fuel gauges

☒ 4. Headlight

Question ID : 26433098033

Status : Answered

Chosen Option : 2

Q.8 In which of the following cases, is the use of horn prohibited?

- Ans
- ☒ 1. Near a Police Station
 - ☒ 2. Near religious establishments
 - ☒ 3. Near highways
 - ☒ 4. Near Hospital, Courts of Law

Question ID : 26433098037

Status : Answered

Chosen Option : 4

Q.9 Nowadays, in case of _____ engine the common rail direct injection system (CRDI) is used for better engine performance.

- Ans
- ☒ 1. both petrol and diesel
 - ☒ 2. CNG
 - ☒ 3. petrol
 - ☒ 4. diesel

Question ID : 26433098034

Status : Not Answered

Chosen Option : --

Q.10



What does this sign indicate?

- Ans
- ☒ 1. Compulsory Keep Left
 - ☒ 2. Compulsory Ahead
 - ☒ 3. Compulsory Ahead or Turn Left/Right
 - ☒ 4. Compulsory Turn Left/Right

Question ID : 26433097898

Status : Answered

Chosen Option : 2

Q.11 Air pollutants harmful effect _____ of humans and animals.

- Ans
- ☐ 1. nervous system
 - ☐ 2. integumentary system
 - ☐ 3. digestive system
 - ☒ 4. respiratory system

Question ID : 26433097888
Status : Answered
Chosen Option : 4

Q.12 As per Indian traffic rule what is the right path for a driver to be followed in normal

- Ans
- ☐ 1. Right
 - ☐ 2. Centre
 - ☒ 3. Left
 - ☐ 4. Both side

Question ID : 26433097981
Status : Answered
Chosen Option : 3

Q.13 The _____ removes out the burnt gases from the combustion chamber after power stroke.

- Ans
- ☐ 1. inlet valve
 - ☒ 2. exhaust valve
 - ☐ 3. cylinder valve
 - ☐ 4. cylinder

Question ID : 26433098013
Status : Answered
Chosen Option : 2

Q.14 Which of the following is controlled by foot in a car?

- Ans
- ☐ 1. Head light
 - ☐ 2. Steering
 - ☐ 3. Wiper
 - ☒ 4. Clutch

Question ID : 26433097967
Status : Answered
Chosen Option : 4

Q.15 A cautionary traffic sign is in shape of

- Ans
- ☐ 1. Square
 - ☐ 2. Rectangular
 - ☒ 3. Triangular
 - ☐ 4. Circular

Question ID : 26433097958
Status : Answered
Chosen Option : 3

Q.16 The sale certificate for permanent registration of a motor vehicle should be accompanied by form number _____

- Ans
- ☐ 1. 22
 - ☒ 2. 21
 - ☐ 3. 20
 - ☐ 4. 22 A

Question ID : 26433097916
Status : Not Answered
Chosen Option : --

Q.17 In a vehicle, the cut-out switch is a component of _____.

- Ans
- ☐ 1. ignition system
 - ☒ 2. charging system
 - ☐ 3. lighting system
 - ☐ 4. starting system

Question ID : 26433097927
Status : Answered
Chosen Option : 4

Q.18 New vehicle registration is done at RTO. What is the full form of RTO?

- Ans
- ☒ 1. Regional Transport Office
 - ☐ 2. Regional Travel Office
 - ☐ 3. Recovery Transport Office
 - ☐ 4. Road Transport Organization

Question ID : 26433097914
Status : Answered
Chosen Option : 1

Q.19 In an IC engine, during the suction stroke, fresh charge enters the engine cylinder through _____.

- Ans
- ☐ 1. rotary valve
 - ☒ 2. inlet valve
 - ☐ 3. exhaust valve
 - ☐ 4. sleeve valve

Question ID : 26433097921
Status : Answered
Chosen Option : 2

Q.20 Which of the following is not a component of standard job card?

- Ans
- ☒ 1. Favourite colour of the customer
 - ☐ 2. Job card number
 - ☐ 3. Name, address and phone number of the customer
 - ☐ 4. Name, address and phone number of the service center

Question ID : 26433098010
Status : Answered
Chosen Option : 1

Q.21 In an internal combustion engine, the main body of an engine is _____.

- Ans
- ☒ 1. cylinder
 - ☐ 2. connecting rod
 - ☐ 3. piston
 - ☐ 4. cylinder head

Question ID : 26433098020
Status : Answered
Chosen Option : 3

Q.22 _____ is used in automobiles to obtain different torques and speeds.

- Ans
- ☐ 1. Differential
 - ☐ 2. Clutch
 - ☐ 3. Steering
 - ☒ 4. Gearbox

Question ID : 26433097924
Status : Answered
Chosen Option : 4

Q.23 _____ is employed in most of the IC engines, whether they are used in automobiles or elsewhere.

- Ans ☒ 1. Liquid cooling
☒ 2. Solid cooling
☒ 3. No cooling
☒ 4. Gaseous cooling

Question ID : 26433098026
Status : Answered
Chosen Option : 1

Q.24 You are moving straight on a road. You see a right turn ahead and want to take that right turn. Which of the following should you do?

- Ans ☒ 1.
Show the left turn signal, move to the centre of the road and turn to the right.
☒ 2.
Show the right turn signal, keep to the right side of the road and turn to the right.
☒ 3.
Slow down, move to extreme left, increase the speed move sharply to right turn
☒ 4.
Increase the speed and take a sharp right turn while blowing the horn.

Question ID : 26433098051
Status : Answered
Chosen Option : 2

Q.25



What does this sign indicate?

- Ans ☒ 1. Right Turn Prohibited
☒ 2. U-Turn Prohibited
☒ 3. Overtaking Prohibited
☒ 4. Left Turn Prohibited

Question ID : 26433097899
Status : Answered
Chosen Option : 3

Q.26 What is the ambient Air Quality Standards in respect of Noise in industrial area in day time?

- Ans
- ☒ 1. 45 dB(A) Leq
 - ☒ 2. 55 dB(A) Leq
 - ☒ 3. 65 dB(A) Leq
 - ☒ 4. 75 dB(A) Leq

Question ID : 26433097979
Status : Answered
Chosen Option : 2

Q.27 This sign means



- Ans
- ☒ 1. Stop
 - ☒ 2. Compulsory horn
 - ☒ 3. No horn
 - ☒ 4. Go ahead

Question ID : 26433097953
Status : Answered
Chosen Option : 2

Q.28 Which of the following is correct regarding the road markings in India?

- Ans
- ☒ 1. White is generally used for kerb and object marking
 - ☒ 2. Centre lines are used for a two-way road
 - ☒ 3. White or yellow together with black are used for kerb and object marking
 - ☒ 4. Yellow markings are used for carriageway markings

Question ID : 26433098050
Status : Marked For Review
Chosen Option : 3

Q.29 When you are approaching a round to which you are about to enter you should ?

- Ans
- ☒ 1. Give way to the vehicles coming from the right direction
 - ☒ 2. Continue into the circular traffic at slow speed
 - ☒ 3. Use the outside lane only
 - ☒ 4. Use the inside lane only

Question ID : 26433097947
Status : Answered
Chosen Option : 1

Q.30 In a vehicle, as the temperature of the coolant in the engine cylinder rises to _____ degrees centigrade, the thermostat valve opens and sends water to the radiator to radiate heat.

- Ans**
- ☒ 1. 61 to 72
 - ☒ 2. 51 to 62
 - ☒ 3. 41 to 52
 - ☒ 4. 71 to 82

Question ID : 26433098025
Status : Not Answered
Chosen Option : --

Q.31 Which is the part of steering system?

- Ans**
- ☒ 1. Clutch
 - ☒ 2. Odometer
 - ☒ 3. Brake drum
 - ☒ 4. Steering wheel

Question ID : 26433097970
Status : Answered
Chosen Option : 4

Q.32 When a vehicle approaches an unprotected railway level crossing, what should the driver do before crossing it?

- Ans**
- ☒ 1. Wait till all the trains of the day have passed
 - ☒ 2. Stop the vehicle on the left side of the road, and ensure that no train or trolley is coming from either side
 - ☒ 3. Wait till hearing the horn of train and then cross
 - ☒ 4. Sound the horn and cross the track as fast as possible

Question ID : 26433098035
Status : Answered
Chosen Option : 2

Q.33 Which of the following is not component of lighting system of a car?

- Ans**
- ☒ 1. Horn
 - ☒ 2. Headlight
 - ☒ 3. Rear light
 - ☒ 4. Side light

Question ID : 26433097972
Status : Answered
Chosen Option : 4

Q.34 As per BS-VI emission norms, diesel vehicles will have to reduce their HC + NOx (hydro carbon + nitrogen oxides) by _____ percent.

- Ans**
- ☒ 1. 95
 - ☒ 2. 82
 - ☒ 3. 43
 - ☒ 4. 68

Question ID : 26433098005
Status : Not Answered
Chosen Option : --

Q.35 The technician checks the cooling system of the vehicle by topping up the _____.

- Ans**
- ☒ 1. oil
 - ☒ 2. normal water
 - ☒ 3. acid
 - ☒ 4. coolant

Question ID : 26433097993
Status : Marked For Review
Chosen Option : 4

Q.36 Temporary registration of a motor vehicle is valid for a maximum of _____.

- Ans**
- ☒ 1. 6 months
 - ☒ 2. 3 months
 - ☒ 3. 1 months
 - ☒ 4. 2 months

Question ID : 26433098065
Status : Answered
Chosen Option : 3

Q.37 After the expiry of period of _____ from the date of first registration, every motor vehicle is required to carry a valid PUC Certificate.

- Ans**
- ☒ 1. two years
 - ☒ 2. six months
 - ☒ 3. eighteen months
 - ☒ 4. one year

Question ID : 26433097907
Status : Answered
Chosen Option : 1

Q.38 This sign means



- Ans
- ☐ 1. Hospital
 - ☒ 2. No entry
 - ☐ 3. Stop
 - ☐ 4. No parking

Question ID : 26433097951
Status : Answered
Chosen Option : 2

Q.39 How can we reduce the air pollutions from vehicle?

- I. Maintaining vehicles regularly
- II. Replace old vehicles
- III. Car pooling

- Ans
- ☐ 1. Only III
 - ☒ 2. I, II and III
 - ☐ 3. I and II only
 - ☐ 4. Only I

Question ID : 26433097990
Status : Answered
Chosen Option : 2

Q.40 When a traffic light is on red, you should

- Ans
- ☐ 1. Keep to the left of the road and slow down
 - ☐ 2. Ignore and move
 - ☒ 3. Stop the vehicle
 - ☐ 4. Speedup your vehicle

Question ID : 26433097960
Status : Answered
Chosen Option : 3

Q.41 In diesel engines the fuel is atomized by the _____.

- Ans
- ☐ 1. engine pump
 - ☐ 2. fuel pump
 - ☐ 3. fuel feed pump
 - ☒ 4. fuel injector

Question ID : 26433098028
Status : Answered
Chosen Option : 4

Q.42 Which of the following is not part of the exhaust emission of vehicle?

- Ans ☒ 1. Cl
☒ 2. NOx
☒ 3. Hydrocarbons
☒ 4. CO

Question ID : 26433098006
Status : Answered
Chosen Option : 1

Q.43 A flashing yellow signal light indicate

- Ans ☒ 1. Maintain current speed
☒ 2. Accelerate vehicle
☒ 3. Take left turn
☒ 4. Slow down speed and proceed safely

Question ID : 26433097961
Status : Answered
Chosen Option : 4

Q.44 As per BS-VI emission norms, petrol vehicles will have to effect a _____ percent reduction in their NOx or nitrogen oxide emissions.

- Ans ☒ 1. 50
☒ 2. 25
☒ 3. 10
☒ 4. 35

Question ID : 26433098004
Status : Not Answered
Chosen Option : --

Q.45 In a four wheeler vehicle _____ is fitted inside the vehicle for the safety of the driver and the passenger.

- Ans ☒ 1. Airbag
☒ 2. Hand gloves
☒ 3. Helmet
☒ 4. Face shields

Question ID : 26433097886
Status : Answered
Chosen Option : 1

Q.46 When a pedestrian step on to a zebra line Infront of you to cross the road

- Ans ☒ 1. Stop before stop line and treat it as a stop signal
- ☒ 2. Continue moving by ignoring him
- ☒ 3. You have to proceed before him
- ☒ 4. Sound horn and speedup your vehicle to cross before him

Question ID : 26433097942
Status : Answered
Chosen Option : 1

Q.47 In terms of transport, what is the full form of PUC?

- Ans ☒ 1. Pollution Under Control
- ☒ 2. Pupil Under Control
- ☒ 3. Population Under Control
- ☒ 4. People Under Control

Question ID : 26433097909
Status : Answered
Chosen Option : 1

Q.48 Clutch is a part of the _____ system.

- Ans ☒ 1. cooling
- ☒ 2. emission
- ☒ 3. transmission
- ☒ 4. lubrication

Question ID : 26433098030
Status : Answered
Chosen Option : 3

Q.49 In the year _____, Euro 1 emission standards were implemented nationwide in India.

- Ans ☒ 1. 1999
- ☒ 2. 2001
- ☒ 3. 2000
- ☒ 4. 1998

Question ID : 26433097891
Status : Marked For Review
Chosen Option : 1

Q.50 The spark ignition engine can be differentiated from the compression ignition engine as per certain factors. Which of the following is not one of those factors?

Ans

- ☐ 1. The type of fuel used.
- ☐ 2. The way the fuel enters in the combustion chamber.
- ☒ 3. The type of tyres used.
- ☐ 4. The way in which fuel is ignited.

Question ID : 26433097968

Status : Answered

Chosen Option : 3

