

DDA Patwari

**Previous Year Paper
20 Aug, 2023 Shift 1**



Test Prime

**ALL EXAMS,
ONE SUBSCRIPTION**



70,000+
Mock Tests



**Personalised
Report Card**



**Unlimited
Re-Attempt**



600+
Exam Covered



**Previous Year
Papers**



**500%
Refund**



ATTEMPT FREE MOCK NOW



DELHI DEVELOPMENT AUTHORITY
RECRUITMENT CELL
VIKAS SADAN, INA, NEW DELHI - 110023
(<https://www.dda.gov.in>)

Advertisement No. 02/2023/Recdt. Cell/Pers./DDA

Participant ID	
Participant Name	
Test Center Name	
Test Date	20/08/2023
Test Time	8:30 AM - 10:30 AM
Subject	Patwari

Section : General Awareness

Q.1 In April 2023, in which of these states of India did the Union Cabinet approve a project to build an advanced gravitational-wave detector?

- Ans ☒ 1. Gujarat
☒ 2. Maharashtra
☒ 3. Uttarakhand
☒ 4. Karnataka

Question ID : 630680313000

Option 1 ID : 6306801217874

Option 2 ID : 6306801217873

Option 3 ID : 6306801217875

Option 4 ID : 6306801217876

Status : Not Answered

Chosen Option : --

Q.2 Who among the following won the Purple Cap in IPL 2023?

- Ans ☒ 1. Rashid Khan
☒ 2. Mohit Sharma
☒ 3. Piyush Chawla
☒ 4. Mohammad Shami

Question ID : 630680312997

Option 1 ID : 6306801217862

Option 2 ID : 6306801217863

Option 3 ID : 6306801217864

Option 4 ID : 6306801217861

Status : Not Answered

Chosen Option : --

Q.3 1770 में, इनमें से किसने प्रयोगों की एक श्रृंखला आयोजित की जिससे हरे पौधों की वृद्धि में वायु की अनिवार्य भूमिका ज्ञात हुई?

- Ans
- ☒ 1. जॉन इंजेनहाउज
 - ☒ 2. हेनरी कैवेंडिश
 - ☒ 3. रॉबर्ट बॉयल
 - ☒ 4. जोसेफ प्रीस्टले

Question ID : 630680313016
Option 1 ID : 6306801217940
Option 2 ID : 6306801217937
Option 3 ID : 6306801217939
Option 4 ID : 6306801217938
Status : Not Answered
Chosen Option : --

Q.4 मई 2023 में, फिजिकल रिसर्च लैबोरेटरी (PRL), अहमदाबाद के एक्सोप्लैनेट रिसर्च ग्रुप के किस भारतीय वैज्ञानिक ने अंतरराष्ट्रीय टीम का नेतृत्व किया, जिसने इस समय तक ज्ञात उच्चतम घनत्व वाले, और वृहस्पति से 13 गुना अधिक द्रव्यमान वाले एक नए वृहस्पति के आकार के बाह्यग्रह की खोज की?

- Ans
- ☒ 1. प्रो. दीपान्विता दत्ता
 - ☒ 2. प्रो. जे.बी. सिंह
 - ☒ 3. प्रो. अभिजीत चक्रवर्ती
 - ☒ 4. प्रो. गगन मोहंती

Question ID : 630680312999
Option 1 ID : 6306801217870
Option 2 ID : 6306801217872
Option 3 ID : 6306801217869
Option 4 ID : 6306801217871
Status : Not Answered
Chosen Option : --

Q.5 इनमें से किसे, 2014 में भारतीय रिजर्व बैंक (RBI) द्वारा NBFC-MFI के लिए भारत के पहले स्व-नियामक संगठन (SRO) के रूप में मान्यता दी गई थी?

- Ans
- ☒ 1. माइक्रो फाइनेंस इंस्टीट्यूशन्स नेटवर्क
 - ☒ 2. भारतीय लघु उद्योग विकास बैंक
 - ☒ 3. नाबार्ड फाइनेंशियल सर्विसेज लिमिटेड
 - ☒ 4. राष्ट्रीय कृषि एवं ग्रामीण विकास बैंक

Question ID : 630680313004
Option 1 ID : 6306801217889
Option 2 ID : 6306801217891
Option 3 ID : 6306801217892
Option 4 ID : 6306801217890
Status : Not Answered
Chosen Option : --

Q.6 In May 2023, which state launched Mukhyamantri Sikho Kamao Yojana which aimed at providing opportunities for unemployed youth to learn and master their desired professions while earning a steady income each month?

- Ans ☒ 1. West Bengal
- ☒ 2. Madhya Pradesh
- ☒ 3. Odisha
- ☒ 4. Assam

Question ID : 630680313001
Option 1 ID : 6306801217877
Option 2 ID : 6306801217880
Option 3 ID : 6306801217879
Option 4 ID : 6306801217878
Status : Answered
Chosen Option : 2

Q.7 Which of the following is INCORRECT about Treaty of Bassein?

- Ans ☒ 1. The peshwa agreed to exclude all Europeans from his service.
- ☒ 2. The peshwa agreed to give up his claims on Surat and Baroda.
- ☒ 3. This treaty led to the Third Maratha War (1803–05) between the British and the Marathas.
- ☒ 4. The peshwa agreed to maintain a British subsidiary force of six battalions.

Question ID : 630680313005
Option 1 ID : 6306801217894
Option 2 ID : 6306801217895
Option 3 ID : 6306801217896
Option 4 ID : 6306801217893
Status : Not Answered
Chosen Option : --

Q.8 What is the interest rate on deposits made under Mahila Samman Savings Certificate (MSSC), a new small-savings scheme for women that was launched for investments from 1 April 2023?

- Ans ☒ 1. 6% per year
- ☒ 2. 7% per year
- ☒ 3. 7.5% per year
- ☒ 4. 6.5% per year

Question ID : 630680313002
Option 1 ID : 6306801217881
Option 2 ID : 6306801217883
Option 3 ID : 6306801217884
Option 4 ID : 6306801217882
Status : Not Answered
Chosen Option : --

Q.9 लाल पांडा किस भारतीय राज्य का 'राजकीय पशु' है?

Ans

✓ 1. सिक्किम

✗ 2. पश्चिम बंगाल

✗ 3. अरुणाचल प्रदेश

✗ 4. मेघालय

Question ID : 630680313010

Option 1 ID : 6306801217913

Option 2 ID : 6306801217915

Option 3 ID : 6306801217914

Option 4 ID : 6306801217916

Status : Answered

Chosen Option : 1

Q.10 Which of the following is a cause of Deficient Demand (Deflationary gap)?

Ans

✗ 1. Surplus on balance of payments

✓ 2. Cut in capital formation

✗ 3. Increase in autonomous investment

✗ 4. Government expenditure > Government revenue

Question ID : 630680313003

Option 1 ID : 6306801217887

Option 2 ID : 6306801217888

Option 3 ID : 6306801217886

Option 4 ID : 6306801217885

Status : Not Answered

Chosen Option : --

Q.11 Which of the following union territories is NOT represented in Rajya Sabha?

Ans

✗ 1. Delhi

✗ 2. Puducherry

✓ 3. Lakshadweep

✗ 4. Jammu & Kashmir

Question ID : 630680313015

Option 1 ID : 6306801217933

Option 2 ID : 6306801217934

Option 3 ID : 6306801217936

Option 4 ID : 6306801217935

Status : Answered

Chosen Option : 4

Q.12 Who wrote the autobiography 'Toward Freedom'?

Ans

✓ 1. Jawaharlal Nehru

✗ 2. Gopal Krishna Gokhale

✗ 3. Sardar Vallabhbhai Patel

✗ 4. BR Ambedker

Question ID : 630680313006

Option 1 ID : 6306801217897

Option 2 ID : 6306801217900

Option 3 ID : 6306801217899

Option 4 ID : 6306801217898

Status : Not Answered

Chosen Option : --

<https://cdn.digialm.com/per/g01/pub/1258/touchstone/AssessmentQPHTMLMode1/1258O23419/1258O23419S4D845/16933905247945645/14...>
4/45

Q.13 WWF-इंडिया की, मध्य भारतीय सतपुड़ा मैकाल दृश्यभूमि (SML) इनमें से किस राज्य के 19 जिलों में विस्तृत है?

- A- मध्य प्रदेश
- B- महाराष्ट्र
- C- छत्तीसगढ़
- D- तेलंगाना

Ans ☒ 1. ABC
☒ 2. ACD
☒ 3. BCD
☒ 4. CAB

Question ID : 630680313011
Option 1 ID : 6306801217918
Option 2 ID : 6306801217919
Option 3 ID : 6306801217917
Option 4 ID : 6306801217920
Status : Not Answered
Chosen Option : --

Q.14 Badri Narayan won the Sahitya Akademi Awards 2022 for which of the following types of literary work?

Ans ☒ 1. Short story
☒ 2. Poetry
☒ 3. Play
☒ 4. Novel

Question ID : 630680313007
Option 1 ID : 6306801217904
Option 2 ID : 6306801217901
Option 3 ID : 6306801217902
Option 4 ID : 6306801217903
Status : Answered
Chosen Option : 2

Q.15 भारतीय शास्त्रीय संगीत का जश्न मनाने के लिए 'सप्तक संगीत समारोह' प्रायः हर साल जनवरी के प्रथम सप्ताह में किस शहर में आयोजित किया जाता है?

Ans ☒ 1. अहमदाबाद
☒ 2. कोलकाता
☒ 3. चेन्नई
☒ 4. नयी दिल्ली

Question ID : 630680313009
Option 1 ID : 6306801217909
Option 2 ID : 6306801217910
Option 3 ID : 6306801217911
Option 4 ID : 6306801217912
Status : Answered
Chosen Option : 4

Q.16 Which of the following traditional games is included by Indian Olympic Association in 37th National Games 2023?

- Ans ☒ 1. Silambam
- ☒ 2. Gatka
- ☒ 3. Gilli Danda
- ☒ 4. Mallakhamba

Question ID : 630680312998
Option 1 ID : 6306801217868
Option 2 ID : 6306801217866
Option 3 ID : 6306801217865
Option 4 ID : 6306801217867
Status : Answered
Chosen Option : 1

Q.17 On 14 September 1949, the Constituent Assembly accepted Hindi, written in the Devnagari Script, as the Official Language of the Union of India based on which formula?

- Ans ☒ 1. Munshi-Saadulla formula
- ☒ 2. Mitter-Khaitan formula
- ☒ 3. Ayyar-Ambedker formula
- ☒ 4. Munshi-Iyenger formula

Question ID : 630680313008
Option 1 ID : 6306801217907
Option 2 ID : 6306801217905
Option 3 ID : 6306801217908
Option 4 ID : 6306801217906
Status : Not Answered
Chosen Option : --

Q.18 In which year did one-third of the members of the Rajya Sabha retire for the first time?

- Ans ☒ 1. 1960
- ☒ 2. 1956
- ☒ 3. 1958
- ☒ 4. 1954

Question ID : 630680313014
Option 1 ID : 6306801217932
Option 2 ID : 6306801217930
Option 3 ID : 6306801217931
Option 4 ID : 6306801217929
Status : Not Answered
Chosen Option : --

Q.19 भारतीय संविधान के किस संशोधन द्वारा, राज्य के नीति निर्देशक सिद्धांतों के अंतर्गत राज्य द्वारा सहकारी समितियों के स्वैच्छिक गठन, स्वायत्त कामकाज, लोकतांत्रिक नियंत्रण और पेशेवर प्रबंधन को बढ़ावा देना अपेक्षित किया गया?

- Ans
- ☒ 1. 42वाँ संशोधन अधिनियम, 1976
 - ☒ 2. 88वाँ संशोधन अधिनियम, 2002
 - ☒ 3. 97वाँ संशोधन अधिनियम, 2011
 - ☒ 4. 43वाँ संशोधन अधिनियम, 1982

Question ID : 630680313013
Option 1 ID : 6306801217927
Option 2 ID : 6306801217926
Option 3 ID : 6306801217925
Option 4 ID : 6306801217928
Status : Not Answered
Chosen Option : --

Q.20 Which of the following states has the lowest percentage of urban literates according to 2011 Census?

- Ans
- ☒ 1. Rajasthan
 - ☒ 2. Bihar
 - ☒ 3. Uttar Pradesh
 - ☒ 4. Madhya Pradesh

Question ID : 630680313012
Option 1 ID : 6306801217923
Option 2 ID : 6306801217921
Option 3 ID : 6306801217922
Option 4 ID : 6306801217924
Status : Not Answered
Chosen Option : --

Section : General Intelligence & Reasoning Ability

Q.1 If $A > M$, $V = D$, $V > A$, $U < D$, $F > C$, $T = C$ and $U > F$, then which of the following conclusions is NOT correct?

- Ans
- ☒ 1. $T < U$
 - ☒ 2. $A > D$
 - ☒ 3. $V > M$
 - ☒ 4. $D > F$

Question ID : 630680313022
Option 1 ID : 6306801217964
Option 2 ID : 6306801217963
Option 3 ID : 6306801217961
Option 4 ID : 6306801217962
Status : Answered
Chosen Option : 2

Q.2 Which two signs and numbers should be interchanged to make the following equation correct?

$112 \div 12 + 7 - 36 \times 16 = 172$

- Ans

✗ 1. 12 and 16; + and ×

✗ 2. 12 and 36; + and −

✓ 3. 7 and 12; × and +

✗ 4. 112 and 36; − and ×

Question ID : 630680313036
 Option 1 ID : 6306801218019
 Option 2 ID : 6306801218020
 Option 3 ID : 6306801218018
 Option 4 ID : 6306801218017
 Status : Answered
 Chosen Option : 3

Q.3 A & B means ‘A is the brother of B’,
 A + B means ‘A is the daughter of B’,
 A @ B means ‘A is the mother of B’ and
 A = B means ‘A is the father of B’.

If R & G = M & T + S @ L @ D, then which of the following statements is NOT correct?

- Ans

✗ 1. M is the brother of L.

✗ 2. S is the wife of G.

✓ 3. T is the daughter of R.

✗ 4. R is L's father's brother.

Question ID : 630680313026
 Option 1 ID : 6306801217978
 Option 2 ID : 6306801217977
 Option 3 ID : 6306801217980
 Option 4 ID : 6306801217979
 Status : Answered
 Chosen Option : 2

Q.4 Select the word-pair that best represents a similar relationship to the one expressed in the pair of words given below.(The words must be considered as meaningful English words and must not be related to each other based on the number of letters/consonants/vowels in the word.)

Bouquet : Flowers

- Ans

✗ 1. Players : Field

✓ 2. Swarm : Bees

✗ 3. Winter : Sweater

✗ 4. Singers : Musicians

Question ID : 630680313028
 Option 1 ID : 6306801217985
 Option 2 ID : 6306801217986
 Option 3 ID : 6306801217988
 Option 4 ID : 6306801217987
 Status : Answered
 Chosen Option : 3

Q.5 Select the number from among the given options that can replace the question mark (?) in the following series.

16, 29, 43, 73, 166, ?

- Ans
- ☒ 1. 556
 - ☒ 2. 502
 - ☒ 3. 542
 - ☒ 4. 438

Question ID : 630680313034
Option 1 ID : 6306801218012
Option 2 ID : 6306801218010
Option 3 ID : 6306801218011
Option 4 ID : 6306801218009
Status : Answered
Chosen Option : 3

Q.6 Select the number from among the given options that can replace the question mark (?) in the following series.

17, 17, 19, 25, 37, 57, ?

- Ans
- ☒ 1. 72
 - ☒ 2. 87
 - ☒ 3. 102
 - ☒ 4. 95

Question ID : 630680313033
Option 1 ID : 6306801218008
Option 2 ID : 6306801218005
Option 3 ID : 6306801218007
Option 4 ID : 6306801218006
Status : Answered
Chosen Option : 2

Q.7 Seven friends named A, B, C, D, E, F and G are sitting around a circular table facing the centre. E is third to the right of B. C is second to the left of A. D is second to the right of A. F is to the immediate right of B. Who is sitting to the immediate left of G?

- Ans
- ☒ 1. B
 - ☒ 2. D
 - ☒ 3. C
 - ☒ 4. A

Question ID : 630680313018
Option 1 ID : 6306801217946
Option 2 ID : 6306801217948
Option 3 ID : 6306801217947
Option 4 ID : 6306801217945
Status : Answered
Chosen Option : 4

Q.8 In a certain code language, if '&' means 'addition', '#' means 'multiplication', '@' means 'division' and '%' means 'subtraction', then find the value of the following expression.

$98 @ (70 @ 5) \% (88 \% 76) \# 4 \& (75 @ 15) \# 3 \& 42$

- Ans
- ☐ 1. 12
 - ☐ 2. 22
 - ☒ 3. 16
 - ☐ 4. 28

Question ID : 630680313035
Option 1 ID : 6306801218013
Option 2 ID : 6306801218015
Option 3 ID : 6306801218014
Option 4 ID : 6306801218016
Status : Answered
Chosen Option : 3

Q.9 Read the given statements and conclusions carefully. Assuming that the information given in the statements is true, even if it appears to be at variance with commonly known facts, decide which of the given conclusions logically follow(s) from the statements.

Statements:
All packets are files.
All files are sticks.
No stick is a button.

Conclusions:
I. No packet is a button.
II. Some sticks are packets.
III. No button is a file.

- Ans
- ☐ 1. Only conclusions I and III follow.
 - ☐ 2. Only conclusions I and II follow.
 - ☒ 3. All of the conclusions I, II and III follow.
 - ☐ 4. Only conclusions II and III follow.

Question ID : 630680313020
Option 1 ID : 6306801217955
Option 2 ID : 6306801217953
Option 3 ID : 6306801217956
Option 4 ID : 6306801217954
Status : Answered
Chosen Option : 3

Q.10 Select the combination of letters that when sequentially placed in the blanks of the given series will complete the series.

B _ W S _ U Y _ E W _ F U _ B E _ S F _ Y

- Ans
- ☐ 1. E F B S Y E U
 - ☐ 2. E F B Y S W U
 - ☐ 3. E F B S Y W F
 - ☒ 4. E F B S Y W U

Question ID : 630680313023
Option 1 ID : 6306801217967
Option 2 ID : 6306801217968
Option 3 ID : 6306801217966
Option 4 ID : 6306801217965
Status : Answered
Chosen Option : 4

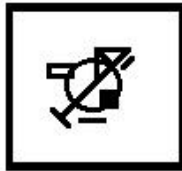
Q.11 Four figures have been given, out of which three are alike in some manner and one is different. Select the one that is different.

Ans

✗ 1.



✓ 2.



✗ 3.



✗ 4.



Question ID : 630680313032

Option 1 ID : 6306801218001

Option 2 ID : 6306801218002

Option 3 ID : 6306801218004

Option 4 ID : 6306801218003

Status : Answered

Chosen Option : 4

Q.12 Four letter-clusters have been given, out of which three are alike in some manner and one is different. Select the one that is different.

Ans

✗ 1. UZEJ

✓ 2. CHLQ

✗ 3. TYDI

✗ 4. RWBG

Question ID : 630680313029

Option 1 ID : 6306801217992

Option 2 ID : 6306801217991

Option 3 ID : 6306801217990

Option 4 ID : 6306801217989

Status : Answered

Chosen Option : 2

Q.13 Eight friends named K, L, M, N, O, P, R and S live on different floors of a building. The ground floor is numbered 1, the floor above it is numbered 2 and so on till the top floor, which is numbered 8. Only two persons live between the floors of S and K. Only two persons live between the floors of M and R. K lives on floor 5. Only three persons live below M's floor. R is either on the top or bottom floor. S lives immediately above L's floor. O lives immediately below L's floor. N does not live on floor 3. Who lives on floor 3?

- Ans
- ☒ 1. S
 - ☒ 2. P
 - ☒ 3. L
 - ☒ 4. O

Question ID : 630680313019

Option 1 ID : 6306801217950

Option 2 ID : 6306801217951

Option 3 ID : 6306801217949

Option 4 ID : 6306801217952

Status : Answered

Chosen Option : 2

Q.14 Select the term from among the given options that can replace the question mark (?) in the following series.

TACW-11, ZFDW-19, ZGIC-46, ?, FMOI-235

- Ans
- ☒ 1. FLJC-120
 - ☒ 2. FNKC-115
 - ☒ 3. FLJC-110
 - ☒ 4. FMJD-112

Question ID : 630680313024

Option 1 ID : 6306801217972

Option 2 ID : 6306801217970

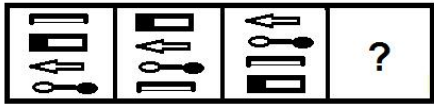
Option 3 ID : 6306801217971

Option 4 ID : 6306801217969

Status : Answered

Chosen Option : 2

Q.15 Select the figure from among the given options that can replace the question mark (?) in the following series.



Ans

- ✗ 1.
- ✗ 2.
- ✗ 3.
- ✓ 4.

Question ID : 630680313031
Option 1 ID : 6306801218000
Option 2 ID : 6306801217999
Option 3 ID : 6306801217998
Option 4 ID : 6306801217997
Status : Answered

Chosen Option : 3

Q.16 If $G = H = L < K$ and $U = K < R < E$, then which of the following conclusions is NOT correct?

- Ans ✗ 1. $E > U$
- ✗ 2. $U > H$
- ✗ 3. $G < K$
- ✓ 4. $R < G$

Question ID : 630680313021
Option 1 ID : 6306801217959
Option 2 ID : 6306801217958
Option 3 ID : 6306801217957
Option 4 ID : 6306801217960
Status : Answered

Chosen Option : 4

Q.17 Nine friends, P, Q, R, S, T, U, V, W and X, are sitting in a straight line facing the north direction. Only three persons are sitting between R and X. Only four persons are sitting between S and V. T is at one of the ends. R is third to the left of P. Only U is sitting between R and T. Only X is sitting between P and Q. V is to the immediate right of R. Who is sitting second to the right of W?

- Ans ☒ 1. X
☒ 2. U
☒ 3. S
☒ 4. Q

Question ID : 630680313017
Option 1 ID : 6306801217943
Option 2 ID : 6306801217944
Option 3 ID : 6306801217941
Option 4 ID : 6306801217942
Status : Answered
Chosen Option : 1

Q.18 Select the option that is related to the fifth letter cluster in the same way as the second letter cluster is related to the first letter cluster and the fourth letter cluster is related to the third letter cluster.

POUCH : RSFKF :: FENCE : HIMHF :: CROWD : ?

- Ans ☒ 1. UFLGZ
☒ 2. VGLZF
☒ 3. UFRGZ
☒ 4. UFGZL

Question ID : 630680313027
Option 1 ID : 6306801217981
Option 2 ID : 6306801217984
Option 3 ID : 6306801217982
Option 4 ID : 6306801217983
Status : Answered
Chosen Option : 1

Q.19 How many pairs of letters are there in the word 'PERHAPS' which have as many letters between them as are there between these two letters in the English alphabet? (Consider counting both forward and backward directions.)

- Ans ☒ 1. One
☒ 2. Two
☒ 3. None
☒ 4. Three

Question ID : 630680313025
Option 1 ID : 6306801217974
Option 2 ID : 6306801217975
Option 3 ID : 6306801217973
Option 4 ID : 6306801217976
Status : Answered
Chosen Option : 1

Q.20 Four word pairs have been given, out of which three are alike in some manner and one is different. Select the one that is different.

(The words must be considered as meaningful English words and must not be related to each other based on the number of letters/consonants/vowels in the word.)

- Ans

✖ 1. Ammeter : Current

✔ 2. Seismograph : Humidity

✖ 3. Barometer : Pressure

✖ 4. Odometer : Distance

Question ID : 630680313030

Option 1 ID : 6306801217996

Option 2 ID : 6306801217994

Option 3 ID : 6306801217995

Option 4 ID : 6306801217993

Status : Answered

Chosen Option : 2

Section : Arithmetical & Numerical Ability

Q.1 The perimeter of a circle inscribed in an equilateral triangle is 88 cm. What is the semi-perimeter (in cm) of the triangle?

(Use $\pi = \frac{22}{7}$)

- Ans

✖ 1. $44\sqrt{3}$

✖ 2. $66\sqrt{3}$

✖ 3. $84\sqrt{3}$

✔ 4. $42\sqrt{3}$

Question ID : 630680313055

Option 1 ID : 6306801218094

Option 2 ID : 6306801218095

Option 3 ID : 6306801218096

Option 4 ID : 6306801218093

Status : Answered

Chosen Option : 1

Q.2 The average sale per day of cars by a dealer in the month of March (excluding Sundays) is 32. The average sale of cars on Mondays is 37 and that on Thursdays is 28. What is the average sale of cars on other days of the month (excluding Sundays) if the month starts with Tuesday?

- Ans

✖ 1. 31

✖ 2. 29

✖ 3. 33

✔ 4. 32

Question ID : 630680313042

Option 1 ID : 6306801218042

Option 2 ID : 6306801218041

Option 3 ID : 6306801218044

Option 4 ID : 6306801218043

Status : Not Answered

Chosen Option : --

Q.3 A bag contains ₹2, ₹5 and ₹10 coins in the ratio of 3 : 5 : 9, amounting to ₹1,210. What is the number of ₹5 coins?

- Ans**
- ☒ 1. 45
 - ☒ 2. 30
 - ☒ 3. 50
 - ☒ 4. 90

Question ID : 630680313048
Option 1 ID : 6306801218067
Option 2 ID : 6306801218066
Option 3 ID : 6306801218065
Option 4 ID : 6306801218068
Status : Answered
Chosen Option : 3

Q.4 एक प्रपत्र में आंकड़े प्रविष्ट करते समय बूटिवश एक विद्यार्थी के अंक 67 के बजाय 97 प्रविष्ट किए गए हैं। परिणामस्वरूप, कक्षा के औसत अंक में आधे अंक की वृद्धि हो जाती है। कक्षा में विद्यार्थियों की संख्या कितनी है?

- Ans**
- ☒ 1. 50
 - ☒ 2. 40
 - ☒ 3. 60
 - ☒ 4. 55

Question ID : 630680313041
Option 1 ID : 6306801218038
Option 2 ID : 6306801218037
Option 3 ID : 6306801218040
Option 4 ID : 6306801218039
Status : Answered
Chosen Option : 3

Q.5 A 360-m-long train passes a man travelling at a speed of 9 km/h, in the opposite direction, in 16 seconds. How long (in seconds) will it take to completely cross another train of length 240 m travelling at a speed of 45 km/h, in the same direction?

- Ans**
- ☒ 1. 90
 - ☒ 2. 96
 - ☒ 3. 108
 - ☒ 4. 80

Question ID : 630680313052
Option 1 ID : 6306801218082
Option 2 ID : 6306801218083
Option 3 ID : 6306801218084
Option 4 ID : 6306801218081
Status : Not Answered
Chosen Option : --

Q.6 A, B and C entered into a partnership with capitals in the ratio of $\frac{5}{8} : \frac{2}{5} : \frac{3}{4}$. After 6 months, A increased his capital by 20%, B increased his capital by 50%, and there was no change in the capital of C. If the difference between the shares of B and C in the annual profit is ₹2,80,000, then the annual profit (in ₹ lakhs) is:

- Ans**
- ☒ 1. 22.4
 - ☒ 2. 20
 - ☒ 3. 21.7
 - ☒ 4. 21

Question ID : 630680313047
Option 1 ID : 6306801218061
Option 2 ID : 6306801218062
Option 3 ID : 6306801218064
Option 4 ID : 6306801218063
Status : Not Answered
Chosen Option : --

Q.7 If $x : (y + z) = 5 : 7$, $z : (x + y) = 7 : 9$ and $x + y + z = 5760$, then the value of y is:

- Ans**
- ☒ 1. 680
 - ☒ 2. 840
 - ☒ 3. 2400
 - ☒ 4. 2520

Question ID : 630680313046
Option 1 ID : 6306801218060
Option 2 ID : 6306801218059
Option 3 ID : 6306801218057
Option 4 ID : 6306801218058
Status : Answered
Chosen Option : 3

Q.8 If the 9-digit number $5947x19y2$ is divisible by 88, then what is the maximum possible value of $(x + y)$?

- Ans**
- ☒ 1. 15
 - ☒ 2. 17
 - ☒ 3. 21
 - ☒ 4. 11

Question ID : 630680313039
Option 1 ID : 6306801218031
Option 2 ID : 6306801218030
Option 3 ID : 6306801218029
Option 4 ID : 6306801218032
Status : Answered
Chosen Option : 3

Q.9 If the curved surface area of a cylinder of height 35 cm is 2200 cm^2 , then its volume is:

(Use $\pi = \frac{22}{7}$)

- Ans**
- ☒ 1. 11770 cm^3
 - ☒ 2. 11000 cm^3
 - ☒ 3. 12100 cm^3
 - ☒ 4. 12500 cm^3

Question ID : 630680313054
Option 1 ID : 6306801218091
Option 2 ID : 6306801218092
Option 3 ID : 6306801218090
Option 4 ID : 6306801218089
Status : Answered
Chosen Option : 2

Q.10 A sum of ₹9,000 amounts to ₹11,979 at $x\%$ p.a. in $1\frac{1}{2}$ years, interest compounded semi-annually. What will be the compound interest on the same sum at the same rate for 2 years if the interest is compounded yearly?

- Ans**
- ☒ 1. ₹3,980
 - ☒ 2. ₹3,890
 - ☒ 3. ₹3,860
 - ☒ 4. ₹3,960

Question ID : 630680313049
Option 1 ID : 6306801218072
Option 2 ID : 6306801218070
Option 3 ID : 6306801218069
Option 4 ID : 6306801218071
Status : Not Answered
Chosen Option : --

Q.11 A thief steals a scooter at 11.00 a.m. and drives it at 50 km/h. At 2:30 p.m., the theft was discovered and the owner of the scooter sets off in a car at 80 km/h in the same direction to catch the thief. At what time will the owner overtake the thief?

- Ans**
- ☒ 1. 8:20 p.m.
 - ☒ 2. 8:30 p.m.
 - ☒ 3. 7:20 p.m.
 - ☒ 4. 7:30 p.m.

Question ID : 630680313053
Option 1 ID : 6306801218088
Option 2 ID : 6306801218087
Option 3 ID : 6306801218086
Option 4 ID : 6306801218085
Status : Answered
Chosen Option : 3

Q.12
Simplify the following.

$$84 \div 18 \times 3 - [168 \div 14 \text{ of } 6 - 30 \div 16 \times (19 - 35) - 35]$$

- Ans

 1. 14

 2. 17

 3. 21

 4. 19

Question ID : 630680313037
 Option 1 ID : 6306801218021
 Option 2 ID : 6306801218022
 Option 3 ID : 6306801218024
 Option 4 ID : 6306801218023
 Status : Answered
 Chosen Option : 1

Q.13
The total surface area of a solid cylinder is 1760 cm² and its height is 18 cm. What is the volume of the cylinder (nearest to an integer)?

(Use $\pi = \frac{22}{7}$)

- Ans

 1. 5657

 2. 5667


 3. 5636

 4. 5646

Question ID : 630680313056
 Option 1 ID : 6306801218099
 Option 2 ID : 6306801218100
 Option 3 ID : 6306801218097
 Option 4 ID : 6306801218098
 Status : Not Answered
 Chosen Option : --


Q.14
Pipes A and B can fill a tank in 20 hours and 12 hours, respectively. Pipe C is an emptying pipe. When all the three pipes are opened together for 5 hours, $\frac{1}{6}$ th part of the tank is filled. Initially, A and B together fill $\frac{3}{5}$ th part of the tank and then C is also opened. In how many hours (total) will the tank be filled completely?

- Ans

 1. 17

 2. $15\frac{1}{2}$

 3. 16

 4. $16\frac{1}{2}$

Question ID : 630680313051
 Option 1 ID : 6306801218080
 Option 2 ID : 6306801218077
 Option 3 ID : 6306801218078
 Option 4 ID : 6306801218079
 Status : Not Answered
 Chosen Option : --

Q.15

If $\frac{32 \times 49 \times x^2}{64 \times 14} = 7$, $x > 0$, then the value of x is:

Ans

- ✓ 1. 2
✗ 2. 4
✗ 3. 3
✗ 4. 8

Question ID : 630680313038
Option 1 ID : 6306801218025
Option 2 ID : 6306801218027
Option 3 ID : 6306801218026
Option 4 ID : 6306801218028
Status : Answered
Chosen Option : 1

Q.16

The value of $\sqrt[3]{1728} - \sqrt[3]{1331} + 2^3$ is:

Ans

- ✗ 1. 7
✓ 2. 9
✗ 3. 10
✗ 4. 8

Question ID : 630680313040
Option 1 ID : 6306801218035
Option 2 ID : 6306801218034
Option 3 ID : 6306801218036
Option 4 ID : 6306801218033
Status : Answered
Chosen Option : 2

Q.17

The price of an article is increased by 35% and then two successive discounts of 20% and 9% are allowed. Ultimately, the price of the article is _____.

Ans

- ✗ 1. increased by 2.65%
✗ 2. decreased by 2.65%
✗ 3. increased by 1.72%
✓ 4. decreased by 1.72%

Question ID : 630680313044
Option 1 ID : 6306801218051
Option 2 ID : 6306801218052
Option 3 ID : 6306801218049
Option 4 ID : 6306801218050
Status : Not Answered
Chosen Option : --

Q.18

B can complete a certain job in 30 days. A is 25% more efficient than B. C is 25% less efficient than B. In how many days will they all complete the same job working together?

- Ans

✗

1.

19

✓

2.

10

✗

3.

15

✗

4.

18

Question ID : 630680313050

Option 1 ID : 6306801218076

Option 2 ID : 6306801218073

Option 3 ID : 6306801218074

Option 4 ID : 6306801218075

Status : Not Answered

Chosen Option : --

Q.19

An article is sold for ₹642.60 after giving two successive discounts of 20% and 16% on its marked price. If no discount is given, then there will be a profit of 25%. What is the cost price (in ₹) of the article?

- Ans

✗

1.

750

✗

2.

775

✓

3.

765

✗

4.

760

Question ID : 630680313045

Option 1 ID : 6306801218053

Option 2 ID : 6306801218056

Option 3 ID : 6306801218055

Option 4 ID : 6306801218054

Status : Not Answered

Chosen Option : --

Q.20

Gita's income is ₹45,000. She saves 16% of her income. If her income increases by 12% and her expenditure increases by 20%, then her savings (in ₹) will decrease by:

- Ans

✗

1.

2,250

✓

2.

2,160

✗

3.

2,210

✗

4.

2,050

Question ID : 630680313043

Option 1 ID : 6306801218048

Option 2 ID : 6306801218046

Option 3 ID : 6306801218047

Option 4 ID : 6306801218045

Status : Not Answered

Chosen Option : --

Section : Hindi (Language & Comprehension)

Q.1 पदक्रम की दृष्टि से कौन सा वाक्य शुद्ध है?

- Ans ☒ 1. हे विधाता, मुझे सद्बुद्धि प्रदान करें।
☒ 2. हे विधाता, सद्बुद्धि प्रदान करें मुझे।
☒ 3. सद्बुद्धि मुझे, हे विधाता, प्रदान करें।
☒ 4. मुझे सद्बुद्धि प्रदान करें, हे विधाता।

Question ID : 630680299809
Option 1 ID : 6306801166168
Option 2 ID : 6306801166167
Option 3 ID : 6306801166170
Option 4 ID : 6306801166169
Status : Answered
Chosen Option : 1

Q.2 'धृष्ट' का विलोम शब्द है-

- Ans ☒ 1. उद्धत
☒ 2. स्तुत्य
☒ 3. कृष्ट
☒ 4. विनम्र

Question ID : 630680299823
Option 1 ID : 6306801166224
Option 2 ID : 6306801166226
Option 3 ID : 6306801166223
Option 4 ID : 6306801166225
Status : Answered
Chosen Option : 3

Q.3 संतों ने बताया है कि सज्जन के क्या होते हैं।
वाक्य के रिक्त स्थान के लिए सर्वाधिक उचित विकल्प का चयन करें।

- Ans ☒ 1. निशान
☒ 2. प्रतीक
☒ 3. चिह्न
☒ 4. लक्षण

Question ID : 630680299816
Option 1 ID : 6306801166196
Option 2 ID : 6306801166197
Option 3 ID : 6306801166195
Option 4 ID : 6306801166198
Status : Answered
Chosen Option : 2

Q.4 गलती पकड़े जाने पर लज्जित होना पड़ता है।
वाक्य के रेखांकित अंश को उचित मुहावरे से प्रतिस्थापित करें।

- Ans ☒ 1. मुँह छिपाना
☒ 2. मुँह पकड़ना
☒ 3. मुँह की खाना
☒ 4. मुँह उतरना

Question ID : 630680299819
Option 1 ID : 6306801166210
Option 2 ID : 6306801166208
Option 3 ID : 6306801166207
Option 4 ID : 6306801166209
Status : Answered
Chosen Option : 1

Q.5 'जीवन में गरल का प्याला भी पीना पड़ता है।' वाक्य के रेखांकित शब्द को उचितविकल्प से प्रतिस्थापित करें।

- Ans
- ☒ 1. अमृत
 - ☒ 2. सुख
 - ☒ 3. विष
 - ☒ 4. दुख

Question ID : 630680299812
Option 1 ID : 6306801166181
Option 2 ID : 6306801166179
Option 3 ID : 6306801166182
Option 4 ID : 6306801166180
Status : Answered
Chosen Option : 3

Q.6 'पूछने योग्य' के लिए एक शब्द है-

- Ans
- ☒ 1. प्रश्नकर्ता
 - ☒ 2. द्रष्टव्य
 - ☒ 3. प्रष्टव्य
 - ☒ 4. प्रश्नचिह्न

Question ID : 630680299811
Option 1 ID : 6306801166177
Option 2 ID : 6306801166176
Option 3 ID : 6306801166175
Option 4 ID : 6306801166178
Status : Answered
Chosen Option : 1

Q.7 परेशान करने के अर्थ में किस मुहावरे का प्रयोग होता है?

- Ans
- ☒ 1. हाथ में दम करना
 - ☒ 2. मुँह में दम करना
 - ☒ 3. कान में दम करना
 - ☒ 4. नाक में दम करना

Question ID : 630680299818
Option 1 ID : 6306801166206
Option 2 ID : 6306801166205
Option 3 ID : 6306801166204
Option 4 ID : 6306801166203
Status : Answered
Chosen Option : 4

Q.8 पदक्रम की दृष्टि से कौन सा वाक्य शुद्ध है?

- Ans
- ☒ 1. सुन्दर दिखता है हंस।
 - ☒ 2. हंस दिखता सुन्दर है।
 - ☒ 3. हंस सुन्दर दिखता है।
 - ☒ 4. हंस दिखता है सुन्दर।

Question ID : 630680299808
Option 1 ID : 6306801166165
Option 2 ID : 6306801166166
Option 3 ID : 6306801166163
Option 4 ID : 6306801166164
Status : Answered
Chosen Option : 3

Q.9 'विकट' का अर्थ है-

- Ans
- ☒ 1. विशेष
 - ☒ 2. भयानक
 - ☒ 3. वीर
 - ☒ 4. विख्यात

Question ID : 630680299821
Option 1 ID : 6306801166218
Option 2 ID : 6306801166215
Option 3 ID : 6306801166217
Option 4 ID : 6306801166216
Status : Answered
Chosen Option : 2

Q.10 कवि कविता का करता है।
वाक्य के रिक्त स्थान के लिए सर्वाधिक उपयुक्त शब्द कौन सा है?

- Ans
- ☒ 1. निष्पादन
 - ☒ 2. निर्माण
 - ☒ 3. सृजन
 - ☒ 4. उत्पादन

Question ID : 630680299815
Option 1 ID : 6306801166194
Option 2 ID : 6306801166192
Option 3 ID : 6306801166193
Option 4 ID : 6306801166191
Status : Answered
Chosen Option : 2

Q.11 'वह बात जो जनसाधारण में चलती आ रही है' कि पारस लोहे को सोना बना देता है, आज भी मानी जाती है। वाक्य के रेखांकित अंश को सही विकल्प से प्रतिस्थापित करें।

- Ans
- ☒ 1. रूढ़ि
 - ☒ 2. कथा
 - ☒ 3. किंवदंती
 - ☒ 4. परंपरा

Question ID : 630680299813
Option 1 ID : 6306801166184
Option 2 ID : 6306801166186
Option 3 ID : 6306801166185
Option 4 ID : 6306801166183
Status : Answered
Chosen Option : 3

Q.12 'आदि से अन्त तक' के लिए सार्थक शब्द है-

- Ans
- ☒ 1. उपरांत
 - ☒ 2. आपादमस्तक
 - ☒ 3. आद्योपांत
 - ☒ 4. आद्यारंभ

Question ID : 630680299810
Option 1 ID : 6306801166174
Option 2 ID : 6306801166172
Option 3 ID : 6306801166173
Option 4 ID : 6306801166171
Status : Answered
Chosen Option : 3

Q.13 विद्यार्थियों को परीक्षा के समय कड़ा करना पड़ता है।
वाक्य के रिक्त स्थान के लिए सर्वाधिक उपयुक्त शब्द कौन सा है?

- Ans
- ☒ 1. प्रयास
 - ☒ 2. परिश्रम
 - ☒ 3. आयास
 - ☒ 4. श्रम

Question ID : 630680299814
Option 1 ID : 6306801166187
Option 2 ID : 6306801166190
Option 3 ID : 6306801166188
Option 4 ID : 6306801166189
Status : Answered
Chosen Option : 2

Q.14 शेर ने पानी में अपनीदेखी।
वाक्य के रिक्त स्थान के लिए सर्वाधिक उपयुक्त विकल्प का चयन करें।

- Ans
- ☒ 1. माया
 - ☒ 2. परछावाँ
 - ☒ 3. छाया
 - ☒ 4. परछाई

Question ID : 630680299817
Option 1 ID : 6306801166202
Option 2 ID : 6306801166200
Option 3 ID : 6306801166199
Option 4 ID : 6306801166201
Status : Answered
Chosen Option : 4

Q.15 अपनी योग्यता से बढ़कर बात नहीं करना चाहिए। वाक्य के रेखांकित अंश को उचित लोकोक्ति से प्रतिस्थापित करें।

- Ans
- ☒ 1. घर की मुर्गी दाल बराबर
 - ☒ 2. छोटा मुँह बड़ी बात
 - ☒ 3. उँगली पकड़ते पहुँचा पकड़ना
 - ☒ 4. उलटे बाँस बरेली को

Question ID : 630680299820
Option 1 ID : 6306801166211
Option 2 ID : 6306801166214
Option 3 ID : 6306801166212
Option 4 ID : 6306801166213
Status : Answered
Chosen Option : 2

Q.16 'नैसर्गिक' किसका पर्याय है?

- Ans
- ☒ 1. स्वाभाविक
 - ☐ 2. अप्राकृतिक
 - ☐ 3. कृत्रिम
 - ☐ 4. भौतिक

Question ID : 630680299822
Option 1 ID : 6306801166220
Option 2 ID : 6306801166222
Option 3 ID : 6306801166221
Option 4 ID : 6306801166219
Status : Answered
Chosen Option : 1

Comprehension:

राजनीतिक व्यवस्था का विद्रूप हमें अपने समय में देखने को मिलता है। सत्ता संघर्ष, लूट-खसोट, शोषण - भ्रष्टाचार के नित नये उदाहरण हमारे सामने आते रहते हैं। भक्ति काव्य में उल्लिखित राजनीतिक शक्तियाँ सत्ता के लिए संघर्ष नहीं करतीं। वे तो प्रेम को पाने और वचन को निभाने के लिए खुशी-खुशी सत्ता का त्याग कर देती हैं। लोक कल्याणकारी राज्य की अवधारणा आधुनिक युग में लोकतंत्र के साथ विकसित होती है। तुलसीदास ने तो भक्तिकाल में ही कह दिया था – जासु राज प्रिय प्रजा दुखारी, सो नृप अवसि नरक अधिकारी। भक्ति काव्य में राजव्यवस्था को ही लोककल्याणकारी नहीं बताया गया, भक्त कवियों के काव्य का मूल प्रयोजन भी लोक मंगल ही है। लोक रंजन भी लोकमंगल का एक रूप है। उपरोक्त गद्यांश के आधार पर निम्नलिखित प्रश्नों के उत्तर दीजिए-

SubQuestion No : 17

Q.17 भक्त कवियों के काव्य का मूल प्रयोजन क्या है?

- Ans
- ☐ 1. लोकतन्त्र
 - ☐ 2. आत्मसुख
 - ☐ 3. चमत्कार प्रदर्शन
 - ☒ 4. लोकमंगल

Question ID : 630680299804
Option 1 ID : 6306801166150
Option 2 ID : 6306801166147
Option 3 ID : 6306801166148
Option 4 ID : 6306801166149
Status : Answered
Chosen Option : 4

Comprehension:

राजनीतिक व्यवस्था का विद्रूप हमें अपने समय में देखने को मिलता है। सत्ता संघर्ष, लूट-खसोट, शोषण - भ्रष्टाचार के नित नये उदाहरण हमारे सामने आते रहते हैं। भक्ति काव्य में उल्लिखित राजनीतिक शक्तियाँ सत्ता के लिए संघर्ष नहीं करतीं। वे तो प्रेम को पाने और वचन को निभाने के लिए खुशी-खुशी सत्ता का त्याग कर देती हैं। लोक कल्याणकारी राज्य की अवधारणा आधुनिक युग में लोकतंत्र के साथ विकसित होती है। तुलसीदास ने तो भक्तिकाल में ही कह दिया था – जासु राज प्रिय प्रजा दुखारी, सो नृप अवसि नरक अधिकारी। भक्ति काव्य में राजव्यवस्था को ही लोककल्याणकारी नहीं बताया गया, भक्त कवियों के काव्य का मूल प्रयोजन भी लोक मंगल ही है। लोक रंजन भी लोकमंगल का एक रूप है। उपरोक्त गद्यांश के आधार पर निम्नलिखित प्रश्नों के उत्तर दीजिए-

SubQuestion No : 18

Q.18 तुलसीदास की पंक्ति ‘जासु राज प्रिय प्रजा दुखारी, सो नृप अवसि नरक अधिकारी’ का संबंध किससे है?

- Ans
- ☒

1. अविकसित राज्य
- ☒

2. अधिकार सम्पन्न राज्य
- ☒

3. सीमित शासन
- ☒

4. लोककल्याणकारी राज्य

Question ID : 630680299806
Option 1 ID : 6306801166157
Option 2 ID : 6306801166155
Option 3 ID : 6306801166158
Option 4 ID : 6306801166156
Status : Answered
Chosen Option : 4

Comprehension:

राजनीतिक व्यवस्था का विद्रूप हमें अपने समय में देखने को मिलता है। सत्ता संघर्ष, लूट-खसोट, शोषण - भ्रष्टाचार के नित नये उदाहरण हमारे सामने आते रहते हैं। भक्ति काव्य में उल्लिखित राजनीतिक शक्तियाँ सत्ता के लिए संघर्ष नहीं करतीं। वे तो प्रेम को पाने और वचन को निभाने के लिए खुशी-खुशी सत्ता का त्याग कर देती हैं। लोक कल्याणकारी राज्य की अवधारणा आधुनिक युग में लोकतंत्र के साथ विकसित होती है। तुलसीदास ने तो भक्तिकाल में ही कह दिया था – जासु राज प्रिय प्रजा दुखारी, सो नृप अवसि नरक अधिकारी। भक्ति काव्य में राजव्यवस्था को ही लोककल्याणकारी नहीं बताया गया, भक्त कवियों के काव्य का मूल प्रयोजन भी लोक मंगल ही है। लोक रंजन भी लोकमंगल का एक रूप है। उपरोक्त गद्यांश के आधार पर निम्नलिखित प्रश्नों के उत्तर दीजिए-

SubQuestion No : 19

Q.19 भक्ति काव्य की राजनीतिक शक्तियाँ क्या पाने के लिए सत्ता को त्याग देती हैं?

- Ans
- ☒

1. सत्य
- ☒

2. धर्म
- ☒

3. प्रेम
- ☒

4. मोक्ष

Question ID : 630680299805
Option 1 ID : 6306801166154
Option 2 ID : 6306801166153
Option 3 ID : 6306801166151
Option 4 ID : 6306801166152
Status : Answered
Chosen Option : 3

Comprehension:

राजनीतिक व्यवस्था का विद्रूप हमें अपने समय में देखने को मिलता है। सत्ता संघर्ष, लूट-खसोट, शोषण - भ्रष्टाचार के नित नये उदाहरण हमारे सामने आते रहते हैं। भक्ति काव्य में उल्लिखित राजनीतिक शक्तियाँ सत्ता के लिए संघर्ष नहीं करतीं। वे तो प्रेम को पाने और वचन को निभाने के लिए खुशी-खुशी सत्ता का त्याग कर देती हैं। लोक कल्याणकारी राज्य की अवधारणा आधुनिक युग में लोकतंत्र के साथ विकसित होती है। तुलसीदास ने तो भक्तिकाल में ही कह दिया था – जासु राज प्रिय प्रजा दुखारी, सो नृप अवसि नरक अधिकारी। भक्ति काव्य में राजव्यवस्था को ही लोककल्याणकारी नहीं बताया गया, भक्त कवियों के काव्य का मूल प्रयोजन भी लोक मंगल ही है। लोक रंजन भी लोकमंगल का एक रूप है। उपरोक्त गद्यांश के आधार पर निम्नलिखित प्रश्नों के उत्तर दीजिए-

SubQuestion No : 20

Q.20 'लोक रंजन' में रंजन का आशय है-

- Ans
- ☒

1. समर्थ बनाना
- ☒

2. प्रसन्न करना
- ☐

3. समर्थन करना
- ☐

4. सहायता करना

Question ID : 630680299807
Option 1 ID : 6306801166161
Option 2 ID : 6306801166162
Option 3 ID : 6306801166159
Option 4 ID : 6306801166160
Status : Answered
Chosen Option : 2

Section : English (Language & Comprehension)

Q.1 Select the most appropriate synonym of the underlined word.
Young people tend to be so mulish that elders find it difficult to strike a conversation with them.

- Ans
- ☒

1. Pig headed
- ☐

2. Indisciplined
- ☐

3. Animalistic
- ☐

4. Lazy

Question ID : 630680311070
Option 1 ID : 6306801210393
Option 2 ID : 6306801210394
Option 3 ID : 6306801210395
Option 4 ID : 6306801210396
Status : Answered
Chosen Option : 1

Q.2 Select the most appropriate synonym of the given word.
Contemplation

- Ans
- ☐

1. Combined thinking
- ☒

2. Introspection
- ☐

3. Convincing
- ☐

4. Temporary

Question ID : 630680311069
Option 1 ID : 6306801210392
Option 2 ID : 6306801210390
Option 3 ID : 6306801210389
Option 4 ID : 6306801210391
Status : Answered
Chosen Option : 1

Q.3 Select the most appropriate ANTONYM of the given word.
Competent

- Ans ☒ 1. Steady
☒ 2. Inept
☒ 3. Confident
☒ 4. Easy

Question ID : 630680311067
Option 1 ID : 6306801210381
Option 2 ID : 6306801210383
Option 3 ID : 6306801210384
Option 4 ID : 6306801210382
Status : Answered
Chosen Option : 2

Q.4 What is the meaning of the underlined phrase?
Once in the university, Appu soon realised that no man is an island.

- Ans ☒ 1. No man is environment friendly.
☒ 2. No man can live alone.
☒ 3. No man is indispensable.
☒ 4. No man is difficult.

Question ID : 630680311064
Option 1 ID : 6306801210372
Option 2 ID : 6306801210369
Option 3 ID : 6306801210370
Option 4 ID : 6306801210371
Status : Not Answered
Chosen Option : --

Q.5 Select the most appropriate ANTONYM of the underlined word.
The boys were excited to go for the trekking, despite knowing that it would be an arduous journey.

- Ans ☒ 1. Phenomenal
☒ 2. Trivial
☒ 3. Exhausting
☒ 4. Arboreal

Question ID : 630680311068
Option 1 ID : 6306801210386
Option 2 ID : 6306801210388
Option 3 ID : 6306801210387
Option 4 ID : 6306801210385
Status : Answered
Chosen Option : 2

Q.6 What is the meaning of the underlined phrase?
The teacher never had a problem with Sumi as her work was always in an apple-pie order.

- Ans
- ☒ 1. Red colour
 - ☒ 2. Chaotic
 - ☒ 3. Beautiful
 - ☒ 4. Perfect order

Question ID : 630680311065
Option 1 ID : 6306801210374
Option 2 ID : 6306801210373
Option 3 ID : 6306801210376
Option 4 ID : 6306801210375
Status : Answered
Chosen Option : 2

Q.7 'Figurehead' is used appropriately in which of the following sentences?

- Ans
- ☒ 1. The queen is merely a figurehead in the State.
 - ☒ 2. Where is the figurehead?
 - ☒ 3. The figurehead in game is beautiful.
 - ☒ 4. Head of a figure is called a figurehead.

Question ID : 630680311055
Option 1 ID : 6306801210333
Option 2 ID : 6306801210335
Option 3 ID : 6306801210334
Option 4 ID : 6306801210336
Status : Not Answered
Chosen Option : --

Q.8 What is the meaning of the underlined phrase?
The CEO used a lot of visuals in her presentations as a picture is worth a thousand words.

- Ans
- ☒ 1. Visuals are inexpensive.
 - ☒ 2. More complicated information can be conveyed using less words.
 - ☒ 3. Visuals take more space in putting across complex ideas.
 - ☒ 4. Visuals make presentation interesting.

Question ID : 630680311063
Option 1 ID : 6306801210367
Option 2 ID : 6306801210366
Option 3 ID : 6306801210368
Option 4 ID : 6306801210365
Status : Answered
Chosen Option : 2

Q.9 What is the meaning of ‘Jaundiced’ in the following sentenced?
 On Seema’s victory, her classmates looked at her with jaundiced eyes.

- Ans

 1. Tearful eyes

 2. Red eyes


 3. Prejudiced eyes


 4. Yellow eyes


Question ID : 630680311056
 Option 1 ID : 6306801210340
 Option 2 ID : 6306801210337
 Option 3 ID : 6306801210339
 Option 4 ID : 6306801210338
 Status : Answered
 Chosen Option : 4


Q.10 In the following passage, some words have been deleted. Read the passage carefully and select the most appropriate option to fill in the blanks.
 The call of the contemporary times is to educate and _____ for a sustainable future. Sustainable development means that developmental processes _____ streamlined in such a way that it meets the need _____ present generation. It also subsumes the idea that the development _____ provide sufficient scope to future generations to meet their needs. _____ is clear that such a development intends to satisfy the _____ of people and not mere greed. Humanity can survive on this _____ only if this message is loud and clear in the _____ of industrialists, bureaucrats and corporate sector.

- Ans

 1. build; are; for; should; It; needs; earth; minds

 2. prepare; are; for; could; It; need; earth; minds


 3. prepare; get; for; should; It; needs; earth; minds


 4. prepare; are; of; should; It; needs; planet; minds


Question ID : 630680311061
 Option 1 ID : 6306801210357
 Option 2 ID : 6306801210360
 Option 3 ID : 6306801210358
 Option 4 ID : 6306801210359
 Status : Answered
 Chosen Option : 3


Q.11 Select the most appropriate option to fill in the blank.
 As the ceremony began, the people _____ the blessings of the deity.

- Ans

 1. invited

 2. invoked

 3. prayed

 4. evoked

Question ID : 630680311057
 Option 1 ID : 6306801210342
 Option 2 ID : 6306801210343
 Option 3 ID : 6306801210344
 Option 4 ID : 6306801210341
 Status : Answered
 Chosen Option : 1

Q.12 Select the most appropriate ANTONYM of the given word.
Dextrous

- Ans ☒ 1. Clumsy
- ☐ 2. Nimble
- ☐ 3. Difficult
- ☐ 4. Creative

Question ID : 630680311066
Option 1 ID : 6306801210378
Option 2 ID : 6306801210377
Option 3 ID : 6306801210380
Option 4 ID : 6306801210379
Status : Answered
Chosen Option : 1

Q.13 Select the option that correctly rectifies the sentence.
'It came as a great relief. To all of us.'

- Ans ☐ 1. It come as a great relief to all of us.
- ☒ 2. It came as a great relief to all of us.
- ☐ 3. It, came as a great relief to all of us.
- ☐ 4. It came as a great relief to all, of us.

Question ID : 630680311059
Option 1 ID : 6306801210352
Option 2 ID : 6306801210349
Option 3 ID : 6306801210350
Option 4 ID : 6306801210351
Status : Answered
Chosen Option : 2

Q.14 In the following passage, some words have been deleted. Read the passage carefully and select the most appropriate option to fill in the blanks.
Everyone agrees that where ___ is a will there ___ be a way. Tough ___ handle situations by analysing ___ and finding a solution. ___ do not lose hope ___ give up easily. They are mentally tough.

- Ans ☐ 1. there; shall; machine; same; Office; so
- ☐ 2. there; shall; machine; same; He; but
- ☐ 3. there; can; machine; same; She; but
- ☒ 4. there; will; people; it; they; and

Question ID : 630680311062
Option 1 ID : 6306801210364
Option 2 ID : 6306801210362
Option 3 ID : 6306801210363
Option 4 ID : 6306801210361
Status : Answered
Chosen Option : 3

Q.15 In the following passage, some words have been deleted. Read the passage carefully and select the most appropriate option to fill in the blanks.
'She found it at last. It _____ had been made for Jim and _____ one else. There was no other _____ it in any of the stores, _____ she had turned all of them _____ out. It was a platinum fob _____, simple and chaste in design, properly _____ its value by substance alone and not by meretricious ornamentation—as all good things should do. It was even worthy of The Watch. As soon as she saw it she knew that it must be Jim's. It was like him. Quietness and value—the description applied to both.' (The Gift of the Magi by O'Henry)

- Ans** ☒ 1. surely; some; like; and; inside; chain; affirming
 ☒ 2. surely; no; like; and; inside; chain; proclaiming
 ☒ 3. perfectly; no; like; in fact; inside; chain; proclaiming
 ☒ 4. definitely; no; akin; and; inside; chain; substantiating

Question ID : 630680311060
Option 1 ID : 6306801210356
Option 2 ID : 6306801210354
Option 3 ID : 6306801210353
Option 4 ID : 6306801210355
Status : Answered
Chosen Option : 2

Q.16 Select the sentence where the following word is inappropriately used.
Advice

- Ans** ☒ 1. Do you need my advice on this issue?
 ☒ 2. I advice you not to go for the trip in this month.
 ☒ 3. His advice is sought by many people in our neighbourhood.
 ☒ 4. Your advice in this matter is useless.

Question ID : 630680311058
Option 1 ID : 6306801210347
Option 2 ID : 6306801210345
Option 3 ID : 6306801210346
Option 4 ID : 6306801210348
Status : Answered
Chosen Option : 4

Comprehension:

“The purpose of the education system is to develop good human beings capable of rational thought and action, possessing compassion and empathy, courage and resilience, scientific temper, and creative imagination, with sound ethical moorings and values. It aims at producing engaged, productive and contributing citizens for building an equitable, inclusive and plural society as envisaged by our Constitution.” (National Education Policy, 2020).The National Educational Policy of India 2020 has called for a major overhauling in school education . The focus is now on integration , with a strong belief that fluidity of knowledge across the curriculum would enhance learning. It will give a holistic picture to the learners and there will be opportunities for creative thoughts and novel solutions to challenges and problems. It will promote divergent thinking without mindless rote memorization aiming at numbers in examinations. The amalgamation of education for head , heart and soul has always been recommended by Indian philosophers and commissions. The challenge has been in its translation into the school curriculum and curriculum transaction in the classroom. With the imminent confrontation with a volatile , uncertain, complex , ambiguous world , our children need something more than just assimilation of facts and figures. They need optimum capability to create and critically analyze information , use the traditional Indian concept of 'jugaad'. Traditionally , Indian homes and schools have been bereft of adequate resources and infrastructure , but the self esteem , curiosity of our children has been impeccable and they resorted to 'jugaad' even in their games and play to make things work for them . Enjoying the process of assimilating odd stuff together and giving a totally new amazing identity of a working item which was never thought about before. This potential mindset of creation needs to be stimulated, NEP 2020 hopes to revive and support this type of creativity in our education system.

SubQuestion No : 17

Q.17 Which option gives the best one sentence summary of the above passage?

- Ans

✗

1. Education must develop holistic personality of an individual

✓

2. The purpose of education is to groom individuals to their full potential and to inspire them to fulfil their social responsibility suitably.

✗

3. Educated people must become entrepreneur

✗

4. Educated people must serve nation

Question ID : 630680311053

Option 1 ID : 6306801210326

Option 2 ID : 6306801210325

Option 3 ID : 6306801210328

Option 4 ID : 6306801210327

Status : Answered

Chosen Option : 2

Comprehension:

"The purpose of the education system is to develop good human beings capable of rational thought and action, possessing compassion and empathy, courage and resilience, scientific temper, and creative imagination, with sound ethical moorings and values. It aims at producing engaged, productive and contributing citizens for building an equitable, inclusive and plural society as envisaged by our Constitution." (National Education Policy, 2020). The National Educational Policy of India 2020 has called for a major overhauling in school education . The focus is now on integration , with a strong belief that fluidity of knowledge across the curriculum would enhance learning. It will give a holistic picture to the learners and there will be opportunities for creative thoughts and novel solutions to challenges and problems. It will promote divergent thinking without mindless rote memorization aiming at numbers in examinations. The amalgamation of education for head , heart and soul has always been recommended by Indian philosophers and commissions. The challenge has been in its translation into the school curriculum and curriculum transaction in the classroom. With the imminent confrontation with a volatile , uncertain, complex , ambiguous world , our children need something more than just assimilation of facts and figures. They need optimum capability to create and critically analyze information , use the traditional Indian concept of 'jugaad'. Traditionally , Indian homes and schools have been bereft of adequate resources and infrastructure , but the self esteem , curiosity of our children has been impeccable and they resorted to 'jugaad' even in their games and play to make things work for them . Enjoying the process of assimilating odd stuff together and giving a totally new amazing identity of a working item which was never thought about before. This potential mindset of creation needs to be stimulated, NEP 2020 hopes to revive and support this type of creativity in our education system.

SubQuestion No : 18

Q.18 What inference would you draw from this given paragraph?

Ans ✓ 1. Education has both social and individual aim

✗ 2. Education has no definite aim

✗ 3. Education has a social aim

✗ 4. Education has individual aim

Question ID : 630680311052

Option 1 ID : 6306801210321

Option 2 ID : 6306801210323

Option 3 ID : 6306801210324

Option 4 ID : 6306801210322

Status : Answered

Chosen Option : 1

Adda247

Comprehension:

"The purpose of the education system is to develop good human beings capable of rational thought and action, possessing compassion and empathy, courage and resilience, scientific temper, and creative imagination, with sound ethical moorings and values. It aims at producing engaged, productive and contributing citizens for building an equitable, inclusive and plural society as envisaged by our Constitution." (National Education Policy, 2020). The National Educational Policy of India 2020 has called for a major overhauling in school education. The focus is now on integration, with a strong belief that fluidity of knowledge across the curriculum would enhance learning. It will give a holistic picture to the learners and there will be opportunities for creative thoughts and novel solutions to challenges and problems. It will promote divergent thinking without mindless rote memorization aiming at numbers in examinations. The amalgamation of education for head, heart and soul has always been recommended by Indian philosophers and commissions. The challenge has been in its translation into the school curriculum and curriculum transaction in the classroom. With the imminent confrontation with a volatile, uncertain, complex, ambiguous world, our children need something more than just assimilation of facts and figures. They need optimum capability to create and critically analyze information, use the traditional Indian concept of 'jugaad'. Traditionally, Indian homes and schools have been bereft of adequate resources and infrastructure, but the self-esteem, curiosity of our children has been impeccable and they resorted to 'jugaad' even in their games and play to make things work for them. Enjoying the process of assimilating odd stuff together and giving a totally new amazing identity of a working item which was never thought about before. This potential mindset of creation needs to be stimulated, NEP 2020 hopes to revive and support this type of creativity in our education system.

SubQuestion No : 19

Q.19 Identify the central theme from the given passage.

- Ans** ☒ 1. The education system must develop citizens for a pluralistic society who are morally upright, compassionate, tolerant, display a scientific temper and have a blend of convergent and divergent thinking capabilities.
- ☐ 2. Education system must develop holistic personality.
- ☐ 3. Education system must build thoughtful, empathetic citizens.
- ☐ 4. Education system must develop responsible citizens who are rational thinkers, morally upright, compassionate, tolerant, creative, courageous and display scientific temper.

Question ID : 630680311051

Option 1 ID : 6306801210320

Option 2 ID : 6306801210317

Option 3 ID : 6306801210318

Option 4 ID : 6306801210319

Status : Answered

Chosen Option : 4

Comprehension:

"The purpose of the education system is to develop good human beings capable of rational thought and action, possessing compassion and empathy, courage and resilience, scientific temper, and creative imagination, with sound ethical moorings and values. It aims at producing engaged, productive and contributing citizens for building an equitable, inclusive and plural society as envisaged by our Constitution." (National Education Policy, 2020).The National Educational Policy of India 2020 has called for a major overhauling in school education . The focus is now on integration , with a strong belief that fluidity of knowledge across the curriculum would enhance learning. It will give a holistic picture to the learners and there will be opportunities for creative thoughts and novel solutions to challenges and problems. It will promote divergent thinking without mindless rote memorization aiming at numbers in examinations. The amalgamation of education for head , heart and soul has always been recommended by Indian philosophers and commissions. The challenge has been in its translation into the school curriculum and curriculum transaction in the classroom. With the imminent confrontation with a volatile , uncertain, complex , ambiguous world , our children need something more than just assimilation of facts and figures. They need optimum capability to create and critically analyze information , use the traditional Indian concept of 'jugaad'. Traditionally , Indian homes and schools have been bereft of adequate resources and infrastructure , but the self esteem , curiosity of our children has been impeccable and they resorted to 'jugaad' even in their games and play to make things work for them . Enjoying the process of assimilating odd stuff together and giving a totally new amazing identity of a working item which was never thought about before. This potential mindset of creation needs to be stimulated, NEP 2020 hopes to revive and support this type of creativity in our education system.

SubQuestion No : 20

Q.20 Identify the tone of the following passage.

- Ans ☒ 1. admonishing
- ☒ 2. Inspirational/visionary
- ☒ 3. Critical
- ☒ 4. instructional

Question ID : 630680311054
Option 1 ID : 6306801210329
Option 2 ID : 6306801210331
Option 3 ID : 6306801210332
Option 4 ID : 6306801210330
Status : Answered
Chosen Option : 2

Section : Basic Computer Knowledge

Q.1 Which of the following are advantages of e-Governance?
i) Improves delivery and efficiency of government services
ii) Increased transparency in administration
iii) Increased legitimacy of government
iv) Improved government interactions with business and industry

- Ans ☒ 1. Only i, ii, iii and iv
- ☒ 2. Only i
- ☒ 3. Only ii, iii and iv
- ☒ 4. Only i, ii and iii

Question ID : 630680313075
Option 1 ID : 6306801218175
Option 2 ID : 6306801218173
Option 3 ID : 6306801218176
Option 4 ID : 6306801218174
Status : Answered
Chosen Option : 4

Q.2 Which of the following file extensions is used for a Microsoft Word 365 macro-enabled document?

- Ans ☒ 1. .docm
 ☐ 2. .dotx
 ☐ 3. .dotm
 ☐ 4. .html

Question ID : 630680313064
Option 1 ID : 6306801218131
Option 2 ID : 6306801218129
Option 3 ID : 6306801218130
Option 4 ID : 6306801218132
Status : Answered
Chosen Option : 1

Q.3 Match the columns.

LIST-I	LIST-II
(a) Windows boot partition	(i) This stores configuration settings for a set of devices and services.
(b) Device Manager	(ii) This partition holds the necessary files for the Windows XP operating system.
(c) Windows XP File Signature Verification Tool	(iii) This provides you with a graphical view of the hardware installed on your computer and helps you manage and troubleshoot it.
(d) Hardware Profiles	(iv) This tool helps to check the digital signature of files.

- Ans ☐ 1. (a)-(iii), (b)-(i), (c)-(iv), (d)-(ii)
 ☐ 2. (a)-(ii), (b)-(i), (c)-(iii), (d)-(iv)
 ☒ 3. (a)-(ii), (b)-(iii), (c)-(iv), (d)-(i)
 ☐ 4. (a)-(i), (b)-(ii), (c)-(iv), (d)-(iii)

Question ID : 630680313063
Option 1 ID : 6306801218128
Option 2 ID : 6306801218127
Option 3 ID : 6306801218125
Option 4 ID : 6306801218126
Status : Answered
Chosen Option : 3

Q.4 Match the columns.

Components of Mobiles Service Delivery Gateway (MSDG)	Descriptions
(a) SMS Gateway	(i) These services are particularly relevant when certain notifications or alerts have to be sent to citizens in a particular area (location).
(b) Interactive Voice Response System	(ii) This gateway provides the common service of SMS to the eGovernance exchange and is used to deliver SMS-based services to all citizens and businesses.
(c) Cell Broadcasting Services (CBS)	(iii) This is an example of a computer-telephone integration (CTI).

- Ans
- ✗ 1. (a)-(i), (b)-(iii), (c)-(ii)
 - ✗ 2. (a)-(iii),(b)-(i), (c)-(ii)
 - ✗ 3. (a)-(i), (b)-(ii), (c)-(iii)
 - ✓ 4. (a)-(ii), (b)-(iii), (c)-(i)

Question ID : 630680313076
Option 1 ID : 6306801218179
Option 2 ID : 6306801218180
Option 3 ID : 6306801218178
Option 4 ID : 6306801218177
Status : Answered
Chosen Option : 2


Q.5 Identify whether the given statements are true or false.
i) In Windows XP, when we click on 'All Programs', a pop-up menu appears. Pop-up menus like these are called cascading menus.
ii) In Windows XP, once you empty Recycle Bin the items are permanently deleted.


- Ans
- ✗ 1. i- False, ii-False
 - ✗ 2. i- False, ii-True
 - ✓ 3. i-True, ii-True
 - ✗ 4. i- True, ii-False


Question ID : 630680313062
Option 1 ID : 6306801218124
Option 2 ID : 6306801218122
Option 3 ID : 6306801218121
Option 4 ID : 6306801218123
Status : Answered
Chosen Option : 2


Q.6 Identify whether the given statements related to MS Word 365 are true or false.
 i) The keyboard shortcut 'Ctrl + Shift + K' is used to format letters as small capitals.
 ii) The keyboard shortcut 'Ctrl + Shift + A' is used to change letters to capital.
 iii) In MS Word 365, the keyboard shortcut 'Ctrl + =' is used to apply subscript formatting.

- Ans

 1. i-True, ii-False, iii-True

 2. i-True, ii-True, iii-True

 3. i-False, ii-True, iii-True

 4. i-False, ii-False, iii-True

Question ID : 630680313066
 Option 1 ID : 6306801218139
 Option 2 ID : 6306801218137
 Option 3 ID : 6306801218138
 Option 4 ID : 6306801218140
 Status : Answered
 Chosen Option : 2


Q.7 In MS Excel 365, _____is available under the Cells menu group within the Home tab.

- Ans

 1. Paste

 2. Format

 3. Format as Table

 4. Sort & Filter

Question ID : 630680313069
 Option 1 ID : 6306801218151
 Option 2 ID : 6306801218150
 Option 3 ID : 6306801218149
 Option 4 ID : 6306801218152
 Status : Answered
 Chosen Option : 3

Q.8 The vacuum tube that was used in the first generation of computers is also called _____.

- Ans

 1. closed circuit

 2. valve

 3. connector

 4. open circuit

Question ID : 630680313057
 Option 1 ID : 6306801218102
 Option 2 ID : 6306801218101
 Option 3 ID : 6306801218104
 Option 4 ID : 6306801218103
 Status : Answered
 Chosen Option : 1

Q.9 A computer's 'diligence' characteristic is evident in which of the following statements?
 i) A computer can perform millions of tasks or calculations with the same consistency and accuracy.
 ii) Computers can process millions (1,000,000) of instructions per second.
 iii) Computer can perform all tasks automatically.
 iv) Computer can store results temporarily in the primary memory.

- Ans**

✔ 1. Only i

✗ 2. Only i, ii and iv

✗ 3. Only ii, iii and iv

✗ 4. Only i, ii and iii

Question ID : 630680313058
 Option 1 ID : 6306801218105
 Option 2 ID : 6306801218107
 Option 3 ID : 6306801218108
 Option 4 ID : 6306801218106
 Status : Answered
 Chosen Option : 4

Q.10 Identify whether the given statements are true or false.
 i) Non-repudiation means ensuring that a transferred message has been sent and received by the parties claiming to have sent and received the message.
 ii) The representation of text in the form of a single string of digits, created using a formula is called a hash function.
 iii) Decryption is the process of converting electronic data into another form, called ciphertext, which cannot be easily understood by anyone except the authorized parties.

- Ans**

✔ 1. i-True, ii-True, iii-False

✗ 2. i- False, ii-True, iii-True

✗ 3. i- True, ii-False, iii-True

✗ 4. i- False, ii-True, iii- False

Question ID : 630680313074
 Option 1 ID : 6306801218169
 Option 2 ID : 6306801218170
 Option 3 ID : 6306801218171
 Option 4 ID : 6306801218172
 Status : Answered
 Chosen Option : 2

Q.11 Which of the following keyboard shortcuts in MS Word 2010 is used to switch to Print Preview?

- Ans**

✗ 1. Shift + F8





✔ 2. Ctrl + Alt + I

✗ 3. Shift + F1

✗ 4. Ctrl + P

Question ID : 630680313065
 Option 1 ID : 6306801218135
 Option 2 ID : 6306801218133
 Option 3 ID : 6306801218136
 Option 4 ID : 6306801218134
 Status : Answered
 Chosen Option : 4

Q.12 Match the columns.

MS PowerPoint 365 icons	Descriptions
(a) 	(i) Pictures
(b) 	(ii) Dictate
(c) 	(iii) Arrange
(d) 	(iv) Header & Footer

- Ans
- ✗ 1. (a)-(ii), (b)-(i), (c)-(iii), (d)-(iv)
 - ✓ 2. (a)-(ii), (b)-(iii), (c)-(iv), (d)-(i)
 - ✗ 3. (a)-(iii),(b)-(i), (c)-(iv), (d)-(ii)
 - ✗ 4. (a)-(i), (b)-(ii), (c)-(iv), (d)-(iii)

Question ID : 630680313073
Option 1 ID : 6306801218167
Option 2 ID : 6306801218165
Option 3 ID : 6306801218168
Option 4 ID : 6306801218166
Status : Answered
Chosen Option : 2

Q.13 Identify whether the given statements are true or false.
i) In MS PowerPoint 365, the keyboard shortcut 'Ctrl + O' is used to open a presentation.
ii) In MS PowerPoint 365, the keyboard shortcut 'F5' is used to start a slide show.
iii) In MS PowerPoint 365, the keyboard shortcut 'Ctrl + S' is used to print a PowerPoint slide.

- Ans
- ✓ 1. i-True, ii-True, iii-False
 - ✗ 2. i- False, ii-True, iii-True
 - ✗ 3. i- False, ii-True, iii- False
 - ✗ 4. i- True, ii-False, iii-True

Question ID : 630680313072
Option 1 ID : 6306801218161
Option 2 ID : 6306801218162
Option 3 ID : 6306801218164
Option 4 ID : 6306801218163
Status : Answered
Chosen Option : 3

Q.14 Match the actions to be taken to select various number of worksheets in MS Excel 365.

Number of worksheets	Actions to be taken
(a) A single sheet	(i) After opening the workbook, right-click a sheet tab and then click the Select All Sheets option.
(b) Two or more non-adjacent sheets	(ii) After opening the workbook, click the tab of the sheet you want to select. The active sheet will be a different color than the other sheets.
(c) All sheets in a workbook	(iii) After opening the workbook, click the tab of the first sheet, then hold down 'Ctrl' while you click the tabs of the other sheets that you want to select.

- Ans** ☒ 1. (a)-(ii), (b)-(iii), (c)-(i)
☒ 2. (a)-(iii),(b)-(i), (c)-(ii)
☒ 3. (a)-(i), (b)-(iii), (c)-(ii)
☒ 4. (a)-(i), (b)-(ii), (c)-(iii)

Question ID : 630680313067
Option 1 ID : 6306801218141
Option 2 ID : 6306801218144
Option 3 ID : 6306801218143
Option 4 ID : 6306801218142
Status : Answered
Chosen Option : 3

Q.15 Which of the following elements of Windows XP can be found on the taskbar?
i) Start button
ii) Systems tray
iii) Recycle Bin icon
iv) Desktop

- Ans** ☒ 1. Only i, ii and iii
☒ 2. Only i, ii and iv
☒ 3. Only i and ii
☒ 4. Only ii, iii and iv

Question ID : 630680313061
Option 1 ID : 6306801218118
Option 2 ID : 6306801218119
Option 3 ID : 6306801218117
Option 4 ID : 6306801218120
Status : Not Answered
Chosen Option : --

Q.16 Match the following formulas in MS Excel 365 with their respective results.

Formulas	Results
(a) =RIGHT("siessies",4)	(i) iessie
(b) =REPLACE("sies",3,2,"sies")	(ii) sies
(c) =CONCAT("es","sies","sies","es")	(iii) sisies
(d) =MID("siessies",2,6)	(iv) essiessies

- Ans
- ☒ 1. (a)-(iii),(b)-(i), (c)-(iv), (d)-(ii)
 - ☒ 2. (a)-(ii), (b)-(iii), (c)-(iv), (d)-(i)
 - ☒ 3. (a)-(i), (b)-(ii), (c)-(iv), (d)-(iii)
 - ☒ 4. (a)-(ii), (b)-(i), (c)-(iii), (d)-(iv)

Question ID : 630680313070
Option 1 ID : 6306801218156
Option 2 ID : 6306801218153
Option 3 ID : 6306801218154
Option 4 ID : 6306801218155
Status : Answered
Chosen Option : 3

Q.17 Which of the following file extensions is used to save an MS PowerPoint 365 macro-enabled design template?

- Ans
- ☒ 1. .potm
 - ☒ 2. .thmx
 - ☒ 3. .ppam
 - ☒ 4. .pps

Question ID : 630680313071
Option 1 ID : 6306801218157
Option 2 ID : 6306801218158
Option 3 ID : 6306801218159
Option 4 ID : 6306801218160
Status : Answered
Chosen Option : 3

Q.18 Identify whether the given statements are true or false.
i) In MS Excel 365, formatting of cells can done by right-clicking on the cell and selecting the Format cell option.
ii) In MS Excel 365, conditional formatting makes it easy to highlight certain values or make particular cells easy to identify.

- Ans
- ☒ 1. i- False, ii-True
 - ☒ 2. i- False, ii-False
 - ☒ 3. i-True, ii-True
 - ☒ 4. i- True, ii-False

Question ID : 630680313068
Option 1 ID : 6306801218146
Option 2 ID : 6306801218148
Option 3 ID : 6306801218145
Option 4 ID : 6306801218147
Status : Answered
Chosen Option : 3

Q.19 Identify whether the given statements are true or false.
i) EDO DRAM is an abbreviation of Extended Data Output Random Access Memory.
ii) SRAM requires a constant power supply, which means that this type of memory consumes lots of power.

- Ans ☒ 1. i- False, ii-False
 ☒ 2. i-True, ii-True
 ☒ 3. i- False, ii-True
 ☒ 4. i- True, ii-False

Question ID : 630680313060
Option 1 ID : 6306801218116
Option 2 ID : 6306801218113
Option 3 ID : 6306801218114
Option 4 ID : 6306801218115
Status : Answered
Chosen Option : 1

Q.20 Match the columns.

Components of CPU	Descriptions
(a) Arithmetic and Logical Unit	(i) This unit temporarily stores data, programs and intermediate and final results of processing.
(b) Control Unit (CU)	(ii) This unit performs functions such as addition, subtraction, multiplication division and comparisons.
(c) Memory Unit	(iii) This unit controls and coordinates the functioning of all parts of the computer.

- Ans ☒ 1. (a)-(i), (b)-(ii), (c)-(iii)
 ☒ 2. (a)-(iii),(b)-(i), (c)-(ii)
 ☒ 3. (a)-(ii), (b)-(iii), (c)-(i)
 ☒ 4. (a)-(i), (b)-(iii), (c)-(ii)

Question ID : 630680313059
Option 1 ID : 6306801218110
Option 2 ID : 6306801218112
Option 3 ID : 6306801218109
Option 4 ID : 6306801218111
Status : Answered
Chosen Option : 3