

DDA Patwari

Previous Year Paper
19 Aug, 2023 Shift 1



Test Prime

**ALL EXAMS,
ONE SUBSCRIPTION**



70,000+
Mock Tests



**Personalised
Report Card**



**Unlimited
Re-Attempt**



600+
Exam Covered



**Previous Year
Papers**



500%
Refund



ATTEMPT FREE MOCK NOW



DELHI DEVELOPMENT AUTHORITY
RECRUITMENT CELL
VIKAS SADAN, INA, NEW DELHI - 110023
(<https://www.dda.gov.in>)

Advertisement No. 02/2023/Recdt. Cell/Pers./DDA

Participant ID	
Participant Name	
Test Center Name	
Test Date	19/08/2023
Test Time	8:30 AM - 10:30 AM
Subject	Patwari

Section : General Awareness

Q.1 Who among the following won the Nobel Prize in 1961 for mapping of the pathway of carbon assimilation in photosynthesis?

- Ans ☒ 1. Melvin Calvin
☒ 2. James Bassham
☒ 3. Rudolph A Marcus
☒ 4. Andrew Benson

Question ID : 630680296248
Option 1 ID : 6306801152660
Option 2 ID : 6306801152661
Option 3 ID : 6306801152663
Option 4 ID : 6306801152662
Status : Not Answered
Chosen Option : --

Q.2 'Swaraj Constitution' is attributed to which of the following national leaders?

- Ans ☒ 1. Moti Lal Nehru
☒ 2. B R Ambedker
☒ 3. Jawahar Lal Nehru
☒ 4. Sardar Vallabh Bhai Patel

Question ID : 630680296246
Option 1 ID : 6306801152655
Option 2 ID : 6306801152652
Option 3 ID : 6306801152653
Option 4 ID : 6306801152654
Status : Answered
Chosen Option : 3

Q.3 Under 'Namo Shetkari Mahasanman Yojana', which got nod from the Maharashtra Cabinet in May 2023, farmers in Maharashtra will get _____ per year as minimum income support.

- Ans
1. ₹7,500

2. ₹4,500

3. ₹6,000

4. ₹5000

Question ID : 630680296233

Option 1 ID : 6306801152603

Option 2 ID : 6306801152600

Option 3 ID : 6306801152602

Option 4 ID : 6306801152601

Status : Answered

Chosen Option : 4

Q.4 The Indian junior men's hockey team won Men's Junior Asia Cup hockey 2023 by defeating which of the following countries?

- Ans
1. South Korea

2. Malaysia

3. Thailand

4. Pakistan

Question ID : 630680296229

Option 1 ID : 6306801152586

Option 2 ID : 6306801152585

Option 3 ID : 6306801152587

Option 4 ID : 6306801152584

Status : Answered

Chosen Option : 2

Q.5 Who become the first female NCC cadet to complete mountaineering course in the Himalayan region in May 2023?

- Ans
1. Malavath Poorna

2. Premalata Agrawal

3. Santosh Yadav

4. Shalini Singh

Question ID : 630680296230

Option 1 ID : 6306801152589

Option 2 ID : 6306801152588

Option 3 ID : 6306801152590

Option 4 ID : 6306801152591

Status : Not Answered

Chosen Option : --

Q.6 Which of the following is a cause of Excess Demand (Inflationary gap) in an economy?

- Ans
- ☐ 1. Cut in autonomous investment
 - ☐ 2. Cut in capital formation
 - ☐ 3. Deficits in balance of payments
 - ☒ 4. Government expenditure > Government revenue

Question ID : 630680296235
Option 1 ID : 6306801152608
Option 2 ID : 6306801152610
Option 3 ID : 6306801152609
Option 4 ID : 6306801152611

Status : Answered

Chosen Option : 1

Q.7 Who is the author of 'All the Lives We Never Lived' (Novel) that won the Sahitya Academy Award 2022 for English language?

- Ans
- ☐ 1. Namita Gokhale
 - ☒ 2. Anuradha Roy
 - ☐ 3. Arundhati Subramaniam
 - ☐ 4. Shashi Tharoor

Question ID : 630680296239
Option 1 ID : 6306801152626
Option 2 ID : 6306801152627
Option 3 ID : 6306801152625
Option 4 ID : 6306801152624

Status : Answered

Chosen Option : 1

Q.8 'Truth, Love and a Little Malice' is an autobiography of which of the following personalities?

- Ans
- ☒ 1. Khushwant Singh
 - ☐ 2. Abhinav Bindra
 - ☐ 3. Sita Ram Goel
 - ☐ 4. Nirad C Chaudhuri

Question ID : 630680296238
Option 1 ID : 6306801152622
Option 2 ID : 6306801152623
Option 3 ID : 6306801152620
Option 4 ID : 6306801152621

Status : Answered

Chosen Option : 2

Q.9 Which of the following Directive Principles of State Policy is NOT based on Gandhian principles?

- Ans ☒ 1. The State shall endeavour to promote cottage industries on an individual or cooperative basis in rural areas.
- ☒ 2. The State shall take steps to organise village panchayats as units of Self Government.
- ☒ 3. The State shall make provisions for securing just and humane conditions of work and for maternity relief.
- ☒ 4. The State shall prohibit intoxicating drinks and drugs that are injurious to health.

Question ID : 630680296245
Option 1 ID : 6306801152649
Option 2 ID : 6306801152648
Option 3 ID : 6306801152651
Option 4 ID : 6306801152650
Status : Answered
Chosen Option : 4

Q.10 According to Census 2011, the gap in literacy rates of males and females is less than 5% points in which of the following states?

- Ans ☒ 1. Mizoram
- ☒ 2. Tamil Nadu
- ☒ 3. Himachal Pradesh
- ☒ 4. Maharashtra

Question ID : 630680296244
Option 1 ID : 6306801152644
Option 2 ID : 6306801152645
Option 3 ID : 6306801152647
Option 4 ID : 6306801152646
Status : Answered
Chosen Option : 1

Q.11 In which of the following states, Micro Financing was first introduced by the SEWA Bank, a division of the Self-Employed Women's Association (SEWA), in 1974?

- Ans ☒ 1. Gujarat
- ☒ 2. West Bengal
- ☒ 3. Maharashtra
- ☒ 4. Odisha

Question ID : 630680296236
Option 1 ID : 6306801152612
Option 2 ID : 6306801152614
Option 3 ID : 6306801152613
Option 4 ID : 6306801152615
Status : Answered
Chosen Option : 3

Q.12 Researchers from which institute have discovered a new species of single-cell algae, known as diatoms, from the northern Western Ghats in May 2023?

- Ans
- 

1. The Indian Institute of Tropical Meteorology, Pune
- 

2. Indira Gandhi Government Medical College & Hospital, Nagpur
- 

3. Agharkar Research Institute (ARI), Pune
- 

4. Tata Institute of Fundamental Research, Mumbai

Question ID : 630680296232

Option 1 ID : 6306801152599

Option 2 ID : 6306801152598

Option 3 ID : 6306801152596

Option 4 ID : 6306801152597

Status : Answered

Chosen Option : 2

Q.13 The purple frog, also known as pignose frog is endemic to which part of India?

- Ans
- 

1. Eastern Himalayas
- 

2. Western Ghats
- 

3. Coastal Plains in the east
- 

4. Eastern Ghats

Question ID : 630680296243

Option 1 ID : 6306801152642

Option 2 ID : 6306801152641

Option 3 ID : 6306801152643

Option 4 ID : 6306801152640

Status : Answered

Chosen Option : 1

Q.14 ‘Mo Ghara’ (My Home) – a credit-linked housing scheme for rural poor with an aim to convert all kutchha houses into pucca ones was introduced in which state in May 2023?

- Ans
- 

1. Assam
- 

2. West Bengal
- 

3. Tripura
- 

4. Odisha

Question ID : 630680296234

Option 1 ID : 6306801152605

Option 2 ID : 6306801152604

Option 3 ID : 6306801152607

Option 4 ID : 6306801152606

Status : Answered

Chosen Option : 4

Q.15 Pondicherry was captured by the Dutch in 1693 but was returned to French company by which treaty in 1699?

- Ans ☒ 1. Treaty of Versailles
- ☒ 2. Treaty of Ryswick
- ☒ 3. Treaty of Paris
- ☒ 4. Treaty of Amiens

Question ID : 630680296237
Option 1 ID : 6306801152619
Option 2 ID : 6306801152616
Option 3 ID : 6306801152617
Option 4 ID : 6306801152618
Status : Answered
Chosen Option : 1

Q.16 Arrange the following languages in the correct chronological order of being declared as the Classical Languages of India.

- A- Tamil
B- Malayalam
C- Telugu
D- Sanskrit

- Ans ☒ 1. ABCD
- ☒ 2. ADCB
- ☒ 3. DABC
- ☒ 4. DACB

Question ID : 630680296240
Option 1 ID : 6306801152629
Option 2 ID : 6306801152628
Option 3 ID : 6306801152630
Option 4 ID : 6306801152631
Status : Answered
Chosen Option : 3

Q.17 For which of the following bills, Joint sittings of the Lok Sabha and the Rajya Sabha has NOT been convened so far?

- Ans ☒ 1. Banking Service Commission (Repeal) Bill, 1977
- ☒ 2. Armed Forces Special Powers Act, 1958
- ☒ 3. Dowry Prohibition Bill, 1959
- ☒ 4. Prevention of Terrorism Bill, 2002

Question ID : 630680296247
Option 1 ID : 6306801152657
Option 2 ID : 6306801152659
Option 3 ID : 6306801152656
Option 4 ID : 6306801152658
Status : Not Answered
Chosen Option : --

Q.18 In May 2023, which of the following states became the first state in the country to launch a state robotics framework with a vision to create a sustainable robotics ecosystem?

- Ans



1. Kerala



2. Telangana



3. Andhra Pradesh



4. Karnataka

Question ID : 630680296231
 Option 1 ID : 6306801152594
 Option 2 ID : 6306801152593
 Option 3 ID : 6306801152592
 Option 4 ID : 6306801152595
 Status : Answered
 Chosen Option : 2

Q.19 Kajari festival which begins on the day of the shukla navami is related to the farmers and celebrated in the state of _____ at the beginning of the sowing season especially by women.

- Ans



1. Bihar



2. Odisha



3. Chhattisgarh



4. Jharkhand

Question ID : 630680296241
 Option 1 ID : 6306801152634
 Option 2 ID : 6306801152635
 Option 3 ID : 6306801152633
 Option 4 ID : 6306801152632
 Status : Answered
 Chosen Option : 3

Q.20 Blackbuck is the 'state animal' of which Indian state?

- Ans



1. Andhra Pradesh



2. Manipur



3. Meghalaya



4. Arunachal Pradesh

Question ID : 630680296242
 Option 1 ID : 6306801152636
 Option 2 ID : 6306801152638
 Option 3 ID : 6306801152639
 Option 4 ID : 6306801152637
 Status : Answered
 Chosen Option : 2

Q.1 Eight people named P, Q, R, S, T, U, V and W are sitting in a straight line facing the north direction. More than two people are sitting towards the left of S. Q is second to the left of T. V is third to the left of T. W is third to the left of S. S is to the immediate left of V. U is fourth to the right of R. Who is sitting second to the right of P?

- Ans
- ☒ 1. V
 - ☒ 2. S
 - ☒ 3. Q
 - ☒ 4. R

Question ID : 630680296249
Option 1 ID : 6306801152666
Option 2 ID : 6306801152665
Option 3 ID : 6306801152667
Option 4 ID : 6306801152664
Status : Answered
Chosen Option : 2

Q.2 If $W < N < L = K > F > R < H$, then which of the following is correct?

- Ans
- ☒ 1. $K > W$
 - ☒ 2. $H > L$
 - ☒ 3. $H > K$
 - ☒ 4. $N > R$

Question ID : 630680296252
Option 1 ID : 6306801152677
Option 2 ID : 6306801152676
Option 3 ID : 6306801152678
Option 4 ID : 6306801152679
Status : Answered
Chosen Option : 1

Q.3 Pointing to the photograph of a boy named Vimal, Janit said, 'he is my wife's brother's father's only son'. How is Vimal related to Janit's father-in-law?

- Ans
- ☒ 1. Father
 - ☒ 2. Brother
 - ☒ 3. Son
 - ☒ 4. Son-in-law

Question ID : 630680296257
Option 1 ID : 6306801152696
Option 2 ID : 6306801152699
Option 3 ID : 6306801152697
Option 4 ID : 6306801152698
Status : Answered
Chosen Option : 3

Q.4 Four letter-cluster pairs have been given, out of which three are alike in some manner and one is different. Select the one that is different.

- Ans

✗ 1. SOCIAL : EQUNCK

✗ 2. CASTLE : UCEGNV

✗ 3. DOCKET : EQFVGM

✓ 4. PRISON : LVSQRV

Question ID : 630680296263
 Option 1 ID : 6306801152720
 Option 2 ID : 6306801152721
 Option 3 ID : 6306801152723
 Option 4 ID : 6306801152722
 Status : Not Answered
 Chosen Option : --

Q.5 In a certain code language, if ‘&’ means ‘addition’, ‘#’ means ‘multiplication’, ‘@’ means ‘division’ and ‘%’ means ‘subtraction’, then find the value of 27 % (48 @ 12) & (76 @ 19) # (25 % 19) & 96 @ 8.

- Ans

✓ 1. 59

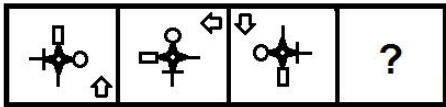
✗ 2. 63

✗ 3. 66

✗ 4. 55

Question ID : 630680296268
 Option 1 ID : 6306801152741
 Option 2 ID : 6306801152742
 Option 3 ID : 6306801152743
 Option 4 ID : 6306801152740
 Status : Answered
 Chosen Option : 1

Q.6 Select the figure from among the given options that can replace the question mark (?) in the following series.



Ans

- ✗ 1.
- ✓ 2.
- ✗ 3.
- ✗ 4.

Question ID : 630680296264
Option 1 ID : 6306801152724
Option 2 ID : 6306801152725
Option 3 ID : 6306801152727
Option 4 ID : 6306801152726
Status : Answered
Chosen Option : 2

Q.7 Select the option that is related to the fifth letter cluster in the same way as the second letter cluster is related to the first letter cluster and the fourth letter cluster is related to the third letter cluster.
FLOP: OUKL :: CAGE : ZXVT :: WOLF : ?

- Ans ✗ 1. LDVK
- ✗ 2. KDVO
- ✓ 3. LDUO
- ✗ 4. DLOU

Question ID : 630680296259
Option 1 ID : 6306801152704
Option 2 ID : 6306801152706
Option 3 ID : 6306801152707
Option 4 ID : 6306801152705
Status : Answered
Chosen Option : 3

Q.8 Select the word-pair that best represents a similar relationship to the one expressed in the pair of words given below.
Vehicle : Truck

- Ans ☒ 1. Police : Security
☒ 2. Ornaments : Beauty
☒ 3. Drapery : Curtain
☒ 4. Insulin : Doctor

Question ID : 630680296260
Option 1 ID : 6306801152711
Option 2 ID : 6306801152708
Option 3 ID : 6306801152709
Option 4 ID : 6306801152710
Status : Answered
Chosen Option : 3

Q.9 'A & B' means 'A is the brother of B'.
'A + B' means 'A is the daughter of B'.
'A @ B' means 'A is the mother of B'.
'A % B' means 'A is the husband of B'.
'A = B' means 'A is the wife of B'.

If 'M & T + Y % N @ K = R', then which of the following statements is NOT correct?

- Ans ☒ 1. K is the daughter of Y
☒ 2. M is the son of N
☒ 3. R is the son of Y
☒ 4. N is the mother of T

Question ID : 630680296258
Option 1 ID : 6306801152703
Option 2 ID : 6306801152701
Option 3 ID : 6306801152700
Option 4 ID : 6306801152702
Status : Answered
Chosen Option : 3

Q.10 Read the given statements and conclusions carefully. Assuming that the information given in the statements is true, even if it appears to be at variance with commonly known facts, decide which of the given conclusions logically follow(s) from the statement(s).

Statements:
 All apples are cashews.
 Some apples are bananas.
 All bananas are figs.

Conclusions:
 I. Some figs are cashews.
 II. No fig is a cashew.
 III. Some apples are figs.

- Ans

✔ 1. Both conclusion I and III follow

✘ 2. Either conclusion I or II follows

✘ 3. Both conclusion II and III follow

✘ 4. Only conclusion I follows

Question ID : 630680296251
 Option 1 ID : 6306801152674
 Option 2 ID : 6306801152675
 Option 3 ID : 6306801152673
 Option 4 ID : 6306801152672
 Status : Answered
 Chosen Option : 1

Q.11 Nine friends named A, B, C, D, E, F, G, H and I live on different floors of a building. The ground floor is number 1, the floor above it is number 2 and so on, till the top floor is number 9. F lives on the top floor. G lives immediately below E's floor. Only two people live below C's floor. Only two people live between B and A. Only D lives between A and C. H lives immediately above I's floor. A lives on floor 5. B does not live on floor 2. E lives on some floor above D. On which floor does H live?

- Ans

✔ 1. Floor 2

✘ 2. Floor 7

✘ 3. Floor 1

✘ 4. Floor 8

Question ID : 630680296250
 Option 1 ID : 6306801152669
 Option 2 ID : 6306801152671
 Option 3 ID : 6306801152668
 Option 4 ID : 6306801152670
 Status : Answered
 Chosen Option : 1

Q.12 Four letter-clusters have been given, out of which three are alike in some manner and one is different. Select the one that is different.

- Ans ☒ 1. RZHPX
☒ 2. CKSAI
☒ 3. FNVDL
☒ 4. QYGOU

Question ID : 630680296261
Option 1 ID : 6306801152715
Option 2 ID : 6306801152712
Option 3 ID : 6306801152713
Option 4 ID : 6306801152714
Status : Answered
Chosen Option : 4

Q.13 2 is added to each even number and 2 is subtracted from each odd number in the given number series, and then all the digits of the newly formed numbers are arranged in descending order. What will be the sum of digits which are second from the left and third from the right in the newly arranged number?
(Left) 4736529 (Right)

- Ans ☒ 1. 13
☒ 2. 12
☒ 3. 10
☒ 4. 11

Question ID : 630680296256
Option 1 ID : 6306801152695
Option 2 ID : 6306801152694
Option 3 ID : 6306801152692
Option 4 ID : 6306801152693
Status : Answered
Chosen Option : 4

Q.14 Select the number from among the given options that can replace the question mark (?) in the following series.
12, 19, 30, 57, 120, ?

- Ans ☒ 1. 186
☒ 2. 258
☒ 3. 247
☒ 4. 212

Question ID : 630680296266
Option 1 ID : 6306801152732
Option 2 ID : 6306801152735
Option 3 ID : 6306801152733
Option 4 ID : 6306801152734
Status : Not Answered
Chosen Option : --

Q.15 Four word pairs have been given, out of which three are alike in some manner and one is different. Select the one that is different.

- Ans ☒ 1. Chef : Restaurant
☐ 2. Lecturer : Education
☐ 3. Doctor : Treatment
☐ 4. Soldier : Security

Question ID : 630680296262
Option 1 ID : 6306801152718
Option 2 ID : 6306801152719
Option 3 ID : 6306801152717
Option 4 ID : 6306801152716
Status : Answered
Chosen Option : 1

Q.16 Select the term from among the given options that can replace the question mark (?) in the following series.
SCRN-7, UATL-17, WYVJ-38, YWXH-81, ?


- Ans ☐ 1. AUZF-165
☒ 2. AUZF-168
☐ 3. AUZG-172
☐ 4. AVZF-168

Question ID : 630680296255
Option 1 ID : 6306801152688
Option 2 ID : 6306801152689
Option 3 ID : 6306801152690
Option 4 ID : 6306801152691
Status : Answered
Chosen Option : 2

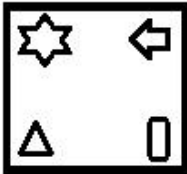
Q.17 Four figures have been given, out of which three are alike in some manner and one is different. Select the one that is different.

Ans

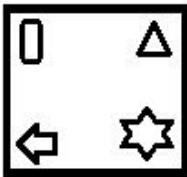
✗ 1.



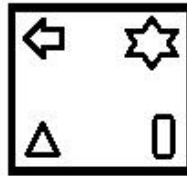
✗ 2.



✗ 3.



✓ 4.



Question ID : 630680296265
Option 1 ID : 6306801152728
Option 2 ID : 6306801152730
Option 3 ID : 6306801152729
Option 4 ID : 6306801152731

Status : Answered

Chosen Option : 3

Q.18 Select the number from among the given options that can replace the question mark (?) in the following series.
51, 74, 103, 134, 171, ?

Ans ✗ 1. 238

✗ 2. 224

✓ 3. 212

✗ 4. 252

Question ID : 630680296267
Option 1 ID : 6306801152738
Option 2 ID : 6306801152737
Option 3 ID : 6306801152736
Option 4 ID : 6306801152739

Status : Answered

Chosen Option : 3

Q.19 If $R = T, Y > K, N < E, K < N, E < P, U > P$ and $T > Y$, then which of the following conclusions is NOT correct?

- Ans
- ☒ 1. $N < U$
 - ☒ 2. $Y > N$
 - ☒ 3. $E < U$
 - ☒ 4. $R > K$

Question ID : 630680296253
Option 1 ID : 6306801152682
Option 2 ID : 6306801152680
Option 3 ID : 6306801152683
Option 4 ID : 6306801152681
Status : Answered
Chosen Option : 2

Q.20 Select the combination of letters that when sequentially placed in the blanks of the given series will complete the series.
N _ R _ D V _ A N T _ E D _ M A _ T R E _ _ M A

- Ans
- ☒ 1. T E M R V T D V
 - ☒ 2. T E N B V N D V
 - ☒ 3. T E M R V N D V
 - ☒ 4. T E M R V N D R

Question ID : 630680296254
Option 1 ID : 6306801152684
Option 2 ID : 6306801152685
Option 3 ID : 6306801152686
Option 4 ID : 6306801152687
Status : Answered
Chosen Option : 3

Section : Arithmetical & Numerical Ability

Q.1 If the length of a certain rectangle is decreased by 6 cm and the width is increased by 4 cm, then a square with the same area as the original rectangle would result. The area of the original rectangle (in cm^2) is:

- Ans
- ☒ 1. 144
 - ☒ 2. 125
 - ☒ 3. 150
 - ☒ 4. 169

Question ID : 630680296287
Option 1 ID : 6306801152817
Option 2 ID : 6306801152816
Option 3 ID : 6306801152818
Option 4 ID : 6306801152819
Status : Answered
Chosen Option : 1

Q.2 A and B started a business with investments in the ratio $\frac{2}{3} : \frac{1}{2}$. After 4 months, A increased his capital by 75% and B doubled his capital. What was the share (in ₹ lakhs) of A in the total profit of ₹33 lakhs, after one year?

- Ans**
- ☒ 1. 20
 - ☒ 2. 16.8
 - ☒ 3. 18
 - ☒ 4. 17.2

Question ID : 630680296279
Option 1 ID : 6306801152787
Option 2 ID : 6306801152784
Option 3 ID : 6306801152786
Option 4 ID : 6306801152785

Status : Answered

Chosen Option : 3

Q.3 A number is increased by 20% and then decreased by 15%. The number so obtained is 98 greater than the original number. What was the original number?

- Ans**
- ☒ 1. 5000
 - ☒ 2. 5100
 - ☒ 3. 4900
 - ☒ 4. 4200

Question ID : 630680296274
Option 1 ID : 6306801152765
Option 2 ID : 6306801152767
Option 3 ID : 6306801152764
Option 4 ID : 6306801152766

Status : Answered

Chosen Option : 3

Q.4 A thief is noticed by a policeman at a distance of 960 m. When the policeman starts the chase at 90 km/h, the thief also starts moving at the same time at a speed of 15 m/s, using a motorbike. How far (in m) would the thief have moved before he is caught by the policeman?

- Ans**
- ☒ 1. 1340
 - ☒ 2. 1380
 - ☒ 3. 1450
 - ☒ 4. 1440

Question ID : 630680296284
Option 1 ID : 6306801152804
Option 2 ID : 6306801152806
Option 3 ID : 6306801152807
Option 4 ID : 6306801152805

Status : Answered

Chosen Option : 3

Q.5 An article was sold for ₹483 at a profit of 15%. If it were sold for ₹441, then what would have been the percentage of profit or loss?

- Ans
- ☒ 1. 8% loss
 - ☒ 2. 5% profit
 - ☒ 3. 5% loss
 - ☒ 4. 9% profit

Question ID : 630680296276

Option 1 ID : 6306801152774

Option 2 ID : 6306801152772

Option 3 ID : 6306801152775

Option 4 ID : 6306801152773

Status : Answered

Chosen Option : 2

Q.6 $(0.\overline{23} \div 0.\overline{25}) \div (0.\overline{8} + 0.\overline{2}) = ?$

- Ans
- ☒ 1. $\frac{11}{10}$
 - ☒ 2. $\frac{9}{11}$
 - ☒ 3. $\frac{9}{13}$
 - ☒ 4. $\frac{9}{10}$

Question ID : 630680296271

Option 1 ID : 6306801152755

Option 2 ID : 6306801152754

Option 3 ID : 6306801152752

Option 4 ID : 6306801152753

Status : Not Answered

Chosen Option : --

Q.7 A and B can do a work in 24 days and 32 days, respectively. They worked for 10 days and C joined with them and completed the remaining work together in 2 days. In how many days C alone can complete the original work?

- Ans
- ☒ 1. 17
 - ☒ 2. 14
 - ☒ 3. 15
 - ☒ 4. 16

Question ID : 630680296281

Option 1 ID : 6306801152795

Option 2 ID : 6306801152792

Option 3 ID : 6306801152793

Option 4 ID : 6306801152794

Status : Answered

Chosen Option : 4

Q.8 A sum of ₹15,000 was lent partly at 7.2% p.a. and partly at 9% per annum simple interest. The total interest received after 3 years was ₹3,699. The ratio of the money lent at 7.2% to that lent at 9% is:

- Ans**
- ☒ 1. 10 : 13
 - ☒ 2. 11 : 14
 - ☒ 3. 15 : 16
 - ☒ 4. 13 : 17

Question ID : 630680296280
Option 1 ID : 6306801152788
Option 2 ID : 6306801152789
Option 3 ID : 6306801152790
Option 4 ID : 6306801152791
Status : Not Answered
Chosen Option : --

Q.9 $\sqrt[3]{\sqrt{729}} + \sqrt[3]{216}$ is equal to:

- Ans**
- ☒ 1. 9
 - ☒ 2. 10
 - ☒ 3. 13
 - ☒ 4. 12

Question ID : 630680296269
Option 1 ID : 6306801152745
Option 2 ID : 6306801152744
Option 3 ID : 6306801152747
Option 4 ID : 6306801152746
Status : Answered
Chosen Option : 1

Q.10 If $a : (b + c) = 7 : 9$ and $c : (a + b) = 9 : 11$, and $a + b + c = 4080$, then what is the value of b ?

- Ans**
- ☒ 1. 1888
 - ☒ 2. 549
 - ☒ 3. 1785
 - ☒ 4. 459

Question ID : 630680296278
Option 1 ID : 6306801152782
Option 2 ID : 6306801152783
Option 3 ID : 6306801152780
Option 4 ID : 6306801152781
Status : Not Answered
Chosen Option : --

Q.11 The average of the first nine multiples of 9 is:

- Ans
- ☐ 1. 54
 - ☐ 2. 63
 - ☐ 3. 36
 - ☒ 4. 45

Question ID : 630680296272
 Option 1 ID : 6306801152757
 Option 2 ID : 6306801152758
 Option 3 ID : 6306801152756
 Option 4 ID : 6306801152759
 Status : Answered
 Chosen Option : 4

Q.12 The surface area of a sphere is the same as the curved surface area of a right circular cylinder whose height and diameter of the base are 2.5 m each. The radius of the sphere is (in cm):

- Ans
- ☐ 1. 123
 - ☐ 2. 142
 - ☐ 3. 145
 - ☒ 4. 125

Question ID : 630680296288
 Option 1 ID : 6306801152821
 Option 2 ID : 6306801152820
 Option 3 ID : 6306801152822
 Option 4 ID : 6306801152823
 Status : Answered
 Chosen Option : 4

Q.13 A tradesman marks his goods at 38% above its cost price and allows a discount of 18% for purchase in cash. What profit per cent does he make if goods are sold in cash?

- Ans
- ☐ 1. 15.05%
 - ☐ 2. 12.25%
 - ☐ 3. 14.12%
 - ☒ 4. 13.16%

Question ID : 630680296277
 Option 1 ID : 6306801152776
 Option 2 ID : 6306801152778
 Option 3 ID : 6306801152777
 Option 4 ID : 6306801152779
 Status : Answered
 Chosen Option : 4

Q.14 A car travels the first one-third distance with a speed of 50 km/h the second one-third distance with a speed of 65 km/h and the last one-third distance with a speed of 70 km/h. The average speed (in km/h) of the car for the whole journey is: (correct to one decimal place)

- Ans**
- ☒ 1. 59.4
 - ☒ 2. 57.6
 - ☒ 3. 60.4
 - ☒ 4. 58.9

Question ID : 630680296273
 Option 1 ID : 6306801152762
 Option 2 ID : 6306801152763
 Option 3 ID : 6306801152761
 Option 4 ID : 6306801152760
 Status : Answered
 Chosen Option : 3

Q.15 A water tank is one-sixth full. Pipes A and B can fill a tank in 6 hours and 9 hours, respectively. If both the pipes are open together, how long will it take to fill the remaining tank completely?

- Ans**
- ☒ 1. 4 hours
 - ☒ 2. 6 hours
 - ☒ 3. 3 hours
 - ☒ 4. 5 hours

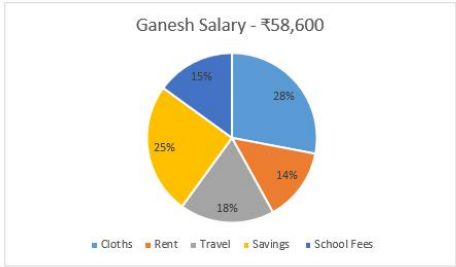
Question ID : 630680296282
 Option 1 ID : 6306801152797
 Option 2 ID : 6306801152798
 Option 3 ID : 6306801152799
 Option 4 ID : 6306801152796
 Status : Answered
 Chosen Option : 3

Q.16 In an election between two candidates, 5% of the total voters did not cast their votes and 12% of the votes polled were declared invalid. The winning candidate got 52% of the valid votes and won by a majority of 40128 votes. The number of valid votes polled was:

- Ans**
- ☒ 1. 1003200
 - ☒ 2. 1014600
 - ☒ 3. 1140000
 - ☒ 4. 969000

Question ID : 630680296275
 Option 1 ID : 6306801152770
 Option 2 ID : 6306801152769
 Option 3 ID : 6306801152771
 Option 4 ID : 6306801152768
 Status : Answered
 Chosen Option : 1

Q.17 Ganesh monthly salary is ₹58,600. His expenditures and savings is given in the following chart. Study the chart and answer the question.



The average expenditure on rent, travel and school fees of Ganesh (in ₹) is:

- Ans
- ✗ 1. 9,179.33
 - ✗ 2. 9,179.67
 - ✗ 3. 9,180.33
 - ✓ 4. 9,180.67

Question ID : 630680296286
Option 1 ID : 6306801152815
Option 2 ID : 6306801152814
Option 3 ID : 6306801152813
Option 4 ID : 6306801152812
Status : Answered
Chosen Option : 4

Q.18 A 360 m long train X passes a pole in 24 seconds and passes completely another train Y, running in the same direction at 42 km/h in $2\frac{1}{2}$ minutes. In how many seconds will train Y cross completely 160 m long train Z running at 48 km/h in the opposite direction?

- Ans
- ✓ 1. 12
 - ✗ 2. 10
 - ✗ 3. 15
 - ✗ 4. 16

Question ID : 630680296283
Option 1 ID : 6306801152802
Option 2 ID : 6306801152803
Option 3 ID : 6306801152801
Option 4 ID : 6306801152800
Status : Not Answered
Chosen Option : --

Q.19 Study the following table and answer the question based on it. The following table gives the percentage of marks obtained by five students in five different subjects in an examination. The numbers in the brackets give the maximum marks in each subject.

Students	Subjects (Maximum Marks)				
	English (100)	Hindi (100)	Mathematics (150)	Physics (120)	Chemistry (120)
A	90	95	92	85	90
B	92	88	96	90	80
C	90	89	90	85	70
D	92	85	94	90	85
E	89	92	98	70	70

The average marks obtained by the student B in the subjects English, Mathematics, Physics and Chemistry is:

- Ans
- ✗ 1. 114
 - ✗ 2. 112
 - ✗ 3. 113
 - ✓ 4. 110

Question ID : 630680296285
Option 1 ID : 6306801152810
Option 2 ID : 6306801152809
Option 3 ID : 6306801152811
Option 4 ID : 6306801152808
Status : Not Answered
Chosen Option : --

Q.20 If a 9-digit number $486743x2y$ is divisible by 55, then a possible value of $(5x - y)$ is:

- Ans
- ✓ 1. 0
 - ✗ 2. 2
 - ✗ 3. 3
 - ✗ 4. 1

Question ID : 630680296270
Option 1 ID : 6306801152748
Option 2 ID : 6306801152750
Option 3 ID : 6306801152751
Option 4 ID : 6306801152749
Status : Answered
Chosen Option : 4

Q.1 तुम अपने नियत समय पर आओ।
वाक्य के रेखांकित शब्द को सही विकल्प से प्रतिस्थापित करें।

- Ans
- ☒ 1. संकेतित
 - ☒ 2. अनिश्चित
 - ☒ 3. निश्चित
 - ☒ 4. अनुमानित

Question ID : 630680296777
Option 1 ID : 6306801154758
Option 2 ID : 6306801154756
Option 3 ID : 6306801154755
Option 4 ID : 6306801154757
Status : Answered
Chosen Option : 3

Q.2 'द्वुत' का विलोम शब्द है-

- Ans
- ☒ 1. मंथर
 - ☒ 2. तीव्र
 - ☒ 3. अधीर
 - ☒ 4. क्षिप्र

Question ID : 630680296787
Option 1 ID : 6306801154795
Option 2 ID : 6306801154796
Option 3 ID : 6306801154798
Option 4 ID : 6306801154797
Status : Answered
Chosen Option : 2

Q.3 'आया हुआ' के लिए एक शब्द है-

- Ans
- ☒ 1. प्रत्यागत
 - ☒ 2. आगत
 - ☒ 3. विगत
 - ☒ 4. गत

Question ID : 630680296776
Option 1 ID : 6306801154754
Option 2 ID : 6306801154753
Option 3 ID : 6306801154752
Option 4 ID : 6306801154751
Status : Answered
Chosen Option : 2

Q.4 कुछ लोग मिथ्या आडंबर करते हैं।
वाक्य के रेखांकित अंश को उचित लोकोक्ति से प्रतिस्थापित करें।

- Ans
- ☒ 1. छलूंदर के सिर में चमेली का तेल
 - ☒ 2. छटांक चून चौबारे रसोई
 - ☐ 3. छीके कोई नाक कटावे कोई
 - ☐ 4. छोटा मुँह बड़ी बात

Question ID : 630680296785
Option 1 ID : 6306801154788
Option 2 ID : 6306801154789
Option 3 ID : 6306801154790
Option 4 ID : 6306801154787
Status : Answered
Chosen Option : 4

Q.5 हमें सही पंथ पर चलना चाहिए।
वाक्य के रेखांकित शब्द को सही विकल्प से प्रतिस्थापित करें।

- Ans
- ☒ 1. मार्ग
 - ☐ 2. धर्म
 - ☐ 3. सिद्धान्त
 - ☐ 4. संप्रदाय

Question ID : 630680296778
Option 1 ID : 6306801154760
Option 2 ID : 6306801154759
Option 3 ID : 6306801154762
Option 4 ID : 6306801154761
Status : Answered
Chosen Option : 3

Q.6 पदक्रम की दृष्टि से कौन सा वाक्य शुद्ध है?

- Ans
- ☐ 1. हे भाई, दया करें गरीब पर।
 - ☒ 2. हे भाई, गरीब पर दया करें।
 - ☐ 3. दया करें हे भाई, गरीब पर।
 - ☐ 4. गरीब पर दया करें, हे भाई।

Question ID : 630680296774
Option 1 ID : 6306801154744
Option 2 ID : 6306801154743
Option 3 ID : 6306801154746
Option 4 ID : 6306801154745
Status : Answered
Chosen Option : 2

Q.7 इस मशीन में कुछ है।
वाक्य के रिक्त स्थान के लिए सर्वाधिक उपयुक्त विकल्प का चयन करें।

- Ans ☒ 1. खटपट
☒ 2. गड़बड़
☒ 3. बड़बड़
☒ 4. भड़भड़

Question ID : 630680296782

Option 1 ID : 6306801154776

Option 2 ID : 6306801154775

Option 3 ID : 6306801154777

Option 4 ID : 6306801154778

Status : Answered

Chosen Option : 2

Q.8 'विकार' का अर्थ है-

- Ans ☒ 1. प्रकृति
☒ 2. दोष
☒ 3. आवेग
☒ 4. गुण

Question ID : 630680296786

Option 1 ID : 6306801154793

Option 2 ID : 6306801154792

Option 3 ID : 6306801154794

Option 4 ID : 6306801154791

Status : Answered

Chosen Option : 2

Q.9 पदक्रम की दृष्टि से कौन सा वाक्य शुद्ध है?

- Ans ☒ 1. बहुत दूर है दिल्ली।
☒ 2. दिल्ली दूर है बहुत।
☒ 3. दिल्ली दूर बहुत है।
☒ 4. दिल्ली बहुत दूर है।

Question ID : 630680296773

Option 1 ID : 6306801154739

Option 2 ID : 6306801154740

Option 3 ID : 6306801154742

Option 4 ID : 6306801154741

Status : Answered

Chosen Option : 4

Q.10 विलोम की दृष्टि से कौन सा युग्म सुमेलित नहीं है?

- Ans
- ☒ 1. सार्थक - निरर्थक
 - ☒ 2. हर्ष - शोक
 - ☒ 3. वियोग - विरह
 - ☒ 4. साकार - निराकार

Question ID : 630680296788

Option 1 ID : 6306801154799

Option 2 ID : 6306801154800

Option 3 ID : 6306801154802

Option 4 ID : 6306801154801

Status : Answered

Chosen Option : 3

Q.11 अधिक प्यारा होने के अर्थ में किस मुहावरे का प्रयोग होता है?

- Ans
- ☒ 1. कान का बाल होना
 - ☒ 2. आँख का बाल होना
 - ☒ 3. पेट का बाल होना
 - ☒ 4. नाक का बाल होना

Question ID : 630680296783

Option 1 ID : 6306801154779

Option 2 ID : 6306801154781

Option 3 ID : 6306801154782

Option 4 ID : 6306801154780

Status : Answered

Chosen Option : 2

Q.12 विधवा बेचारी कर रही थी।

वाक्य के रिक्त स्थान के लिए सर्वाधिक उपयुक्त शब्द कौन सा है?

- Ans
- ☒ 1. आलाप
 - ☒ 2. क्लेश
 - ☒ 3. निनाद
 - ☒ 4. विलाप

Question ID : 630680296779

Option 1 ID : 6306801154765

Option 2 ID : 6306801154766

Option 3 ID : 6306801154764

Option 4 ID : 6306801154763

Status : Answered

Chosen Option : 4

Q.13 रोहित को राहुल की ईमानदारी पर है।
वाक्य के रिक्त स्थान के लिए सर्वाधिक उपयुक्त शब्द कौन सा है?

- Ans
- ☒ 1. ग्लानि
 - ☒ 2. भ्रांति
 - ☒ 3. भ्रम
 - ☒ 4. संदेह

Question ID : 630680296780
Option 1 ID : 6306801154770
Option 2 ID : 6306801154768
Option 3 ID : 6306801154767
Option 4 ID : 6306801154769
Status : Answered
Chosen Option : 4

Q.14 मेरी हमारे घर के कामकाज में कुशल है।
वाक्य के रिक्त स्थान के लिए सर्वाधिक उचित विकल्प का चयन करें।

- Ans
- ☒ 1. नारी
 - ☒ 2. महिला
 - ☒ 3. स्त्री
 - ☒ 4. पत्नी

Question ID : 630680296781
Option 1 ID : 6306801154774
Option 2 ID : 6306801154773
Option 3 ID : 6306801154771
Option 4 ID : 6306801154772
Status : Answered
Chosen Option : 4

Q.15 'रात और संध्या के बीच की बेला' वाक्यांश के लिए सार्थक शब्द है-

- Ans
- ☒ 1. रजनी
 - ☒ 2. गोधूलि
 - ☒ 3. निशा
 - ☒ 4. विभावरी

Question ID : 630680296775
Option 1 ID : 6306801154748
Option 2 ID : 6306801154750
Option 3 ID : 6306801154747
Option 4 ID : 6306801154749
Status : Not Answered
Chosen Option : --

Q.16 सफाई सबको पसंद होनी चाहिए।
इस अर्थ के लिए उपयुक्त लोकोक्ति कौन सी है?

- Ans
- ☒ 1. कोयल होय न उजली सौ मन साबुन लाइ
 - ☒ 2. कागज की नाव नहीं चलती
 - ☒ 3. कुत्ता भी दुम हिलाकर बैठता है
 - ☒ 4. कमली ओढ़ने से फकीर नहीं होता

Question ID : 630680296784

Option 1 ID : 6306801154785

Option 2 ID : 6306801154784

Option 3 ID : 6306801154786

Option 4 ID : 6306801154783

Status : Answered

Chosen Option : 3

Comprehension:

भक्ति काव्य को धार्मिक काव्य मानकर उसमें निहित दर्शन, अध्यात्म, रहस्य पर जोर दिया गया है जबकि भक्ति काव्य की विचार पद्धति में ऐसे अनेक सूत्र हैं जो आज की भाषा में प्रगतिशील कहे जायेंगे। यह कहना अतिशयोक्ति नहीं होगी कि भक्ति काव्य में पुरजोर ढंग से कहे गये उसके विचार-सूत्र ऐसे हैं जो आज की आधुनिकता और प्रगतिशीलता से अधिक आधुनिक और प्रगतिशील हैं। उसमें धार्मिक कट्टरता, अन्धविश्वास, रूढ़ियों, पाखण्डों का तीव्र खण्डन है तो सामाजिक वर्ग-भेद के खिलाफ खुलकर आक्रोश व्यक्त किया गया है। आधुनिक विश्व में मार्क्सवाद के प्रसार के साथ श्रम की महत्ता स्थापित हुई। दुनिया में समतामूलक समाज की स्थापना के लिए, वर्ग संघर्ष के खात्मे के लिए, श्रमिक वर्ग को श्रम का वास्तविक मूल्य दिलाने के लिए मार्क्स ने क्रान्ति की अवधारणा प्रस्तुत की। भक्ति काव्य का बड़ा हिस्सा श्रमिक संस्कृति की उपज है। अनेक भक्त कवि श्रमिक हैं, कारीगर हैं। उपरोक्त गद्यांश के आधार पर निम्नलिखित प्रश्नों के उत्तर दीजिए-

SubQuestion No : 17

Q.17 गद्यांश का सर्वाधिक उपयुक्त शीर्षक कौन सा है?

- Ans
- ☒ 1. भक्तिकाव्य की धार्मिकता
 - ☒ 2. भक्तिकाव्य का दर्शन
 - ☒ 3. भक्तिकाव्य की प्रगतिशीलता
 - ☒ 4. भक्तिकाव्य का आदर्श

Question ID : 630680296772

Option 1 ID : 6306801154737

Option 2 ID : 6306801154736

Option 3 ID : 6306801154738

Option 4 ID : 6306801154735

Status : Answered

Chosen Option : 3

Comprehension:

भक्ति काव्य को धार्मिक काव्य मानकर उसमें निहित दर्शन, अध्यात्म, रहस्य पर जोर दिया गया है जबकि भक्ति काव्य की विचार पद्धति में ऐसे अनेक सूत्र हैं जो आज की भाषा में प्रगतिशील कहे जायेंगे। यह कहना अतिशयोक्ति नहीं होगी कि भक्ति काव्य में पुरजोर ढंग से कहे गये उसके विचार-सूत्र ऐसे हैं जो आज की आधुनिकता और प्रगतिशीलता से अधिक आधुनिक और प्रगतिशील हैं। उसमें धार्मिक कट्टरता, अन्धविश्वास, रूढ़ियों, पाखण्डों का तीव्र खण्डन है तो सामाजिक वर्ग-भेद के खिलाफ खुलकर आक्रोश व्यक्त किया गया है। आधुनिक विश्व में मार्क्सवाद के प्रसार के साथ श्रम की महत्ता स्थापित हुई। दुनिया में समतामूलक समाज की स्थापना के लिए, वर्ग संघर्ष के खात्मे के लिए, श्रमिक वर्ग को श्रम का वास्तविक मूल्य दिलाने के लिएमार्क्स ने क्रान्ति की अवधारणा प्रस्तुत की। भक्ति काव्य का बड़ा हिस्सा श्रमिक संस्कृति की उपज है। अनेक भक्त कवि श्रमिक हैं, कारीगर हैं। उपरोक्त गद्यांश के आधार पर निम्नलिखित प्रश्नों के उत्तर दीजिए-

SubQuestion No : 18

Q.18 मार्क्स की क्रांति की अवधारणा का लक्ष्य है-

- Ans

1. समतामूलक समाज

2. धर्ममूलक समाज

3. संपत्तिमूलक समाज

4. स्वतंत्रतामूलक समाज
- Question ID : 630680296770

Option 1 ID : 6306801154729

Option 2 ID : 6306801154730

Option 3 ID : 6306801154727

Option 4 ID : 6306801154728

Status : Answered

Chosen Option : 1
- Comprehension:
- भक्ति काव्य को धार्मिक काव्य मानकर उसमें निहित दर्शन, अध्यात्म, रहस्य पर जोर दिया गया है जबकि भक्ति काव्य की विचार पद्धति में ऐसे अनेक सूत्र हैं जो आज की भाषा में प्रगतिशील कहे जायेंगे। यह कहना अतिशयोक्ति नहीं होगी कि भक्ति काव्य में पुरजोर ढंग से कहे गये उसके विचार-सूत्र ऐसे हैं जो आज की आधुनिकता और प्रगतिशीलता से अधिक आधुनिक और प्रगतिशील हैं। उसमें धार्मिक कट्टरता, अन्धविश्वास, रूढ़ियों, पाखण्डों का तीव्र खण्डन है तो सामाजिक वर्ग-भेद के खिलाफ खुलकर आक्रोश व्यक्त किया गया है। आधुनिक विश्व में मार्क्सवाद के प्रसार के साथ श्रम की महत्ता स्थापित हुई। दुनिया में समतामूलक समाज की स्थापना के लिए, वर्ग संघर्ष के खात्मे के लिए, श्रमिक वर्ग को श्रम का वास्तविक मूल्य दिलाने के लिएमार्क्स ने क्रान्ति की अवधारणा प्रस्तुत की। भक्ति काव्य का बड़ा हिस्सा श्रमिक संस्कृति की उपज है। अनेक भक्त कवि श्रमिक हैं, कारीगर हैं। उपरोक्त गद्यांश के आधार पर निम्नलिखित प्रश्नों के उत्तर दीजिए-
- SubQuestion No : 19
- Q.19 मार्क्सवाद में किसकी महत्ता स्थापित हुई?
- Ans

1. संपत्ति की

2. अधिकार की

3. श्रम की

4. स्वतन्त्रता की

Question ID : 630680296769

Option 1 ID : 6306801154723

Option 2 ID : 6306801154725

Option 3 ID : 6306801154724

Option 4 ID : 6306801154726

Status : Answered

Chosen Option : 3

Comprehension:

भक्ति काव्य को धार्मिक काव्य मानकर उसमें निहित दर्शन, अध्यात्म, रहस्य पर जोर दिया गया है जबकि भक्ति काव्य की विचार पद्धति में ऐसे अनेक सूत्र हैं जो आज की भाषा में प्रगतिशील कहे जायेंगे। यह कहना अतिशयोक्ति नहीं होगी कि भक्ति काव्य में पुरजोर ढंग से कहे गये उसके विचार-सूत्र ऐसे हैं जो आज की आधुनिकता और प्रगतिशीलता से अधिक आधुनिक और प्रगतिशील हैं। उसमें धार्मिक कट्टरता, अन्धविश्वास, रूढ़ियों, पाखण्डों का तीव्र खण्डन है तो सामाजिक वर्ग-भेद के खिलाफ खुलकर आक्रोश व्यक्त किया गया है। आधुनिक विश्व में मार्क्सवाद के प्रसार के साथ श्रम की महत्ता स्थापित हुई। दुनिया में समतामूलक समाज की स्थापना के लिए, वर्ग संघर्ष के खात्मे के लिए, श्रमिक वर्ग को श्रम का वास्तविक मूल्य दिलाने के लिएमार्क्स ने क्रान्ति की अवधारणा प्रस्तुत की। भक्ति काव्य का बड़ा हिस्सा श्रमिक संस्कृति की उपज है। अनेक भक्त कवि श्रमिक हैं, कारीगर हैं। उपरोक्त गद्यांश के आधार पर निम्नलिखित प्रश्नों के उत्तर दीजिए-

SubQuestion No : 20

Q.20 पारंपरिक अवधारणा में भक्तिकाव्य का स्वरूप है-

- Ans

✗

1. प्रगतिशील

✓

2. धार्मिक

✗

3. राजनीतिक

✗

4. आधुनिक

Question ID : 630680296771

Option 1 ID : 6306801154732

Option 2 ID : 6306801154731

Option 3 ID : 6306801154734

Option 4 ID : 6306801154733

Status : Answered

Chosen Option : 2

Section : English (Language & Comprehension)

Q.1 Select the most appropriate option to fill in the blank.
She remains quiet in class. _____ waters run deep.

- Ans

✓

1. Still

✗

2. Current

✗

3. Cold

✗

4. Warm

Question ID : 630680309409

Option 1 ID : 6306801203790

Option 2 ID : 6306801203789

Option 3 ID : 6306801203792

Option 4 ID : 6306801203791

Status : Answered

Chosen Option : 2

Q.2 Select the most appropriate option to fill in the blank.
Red-tapism means _____.

- Ans
- ☐ 1. marking something as very important
 - ☐ 2. putting a red tape on something
 - ☐ 3. adherence to official regulations strictly
 - ☒ 4. adherence to official regulations strictly such that it causes delay and hinders smooth functioning of organisations

Question ID : 630680309400
Option 1 ID : 6306801203756
Option 2 ID : 6306801203753
Option 3 ID : 6306801203754
Option 4 ID : 6306801203755
Status : Answered
Chosen Option : 4

Q.3 Select the most appropriate option to fill in the blank.
Neocracy refers to _____.

- Ans
- ☐ 1. a government by experienced people
 - ☐ 2. a government not interested in development
 - ☒ 3. a government by the new or inexperienced
 - ☐ 4. a government by known people

Question ID : 630680309399
Option 1 ID : 6306801203751
Option 2 ID : 6306801203752
Option 3 ID : 6306801203749
Option 4 ID : 6306801203750
Status : Answered
Chosen Option : 3

Q.4 Select the most appropriate ANTONYM of the underlined word.
There is a conflation of fact and fiction in his story.

- Ans
- ☐ 1. Confusion
 - ☒ 2. Split
 - ☐ 3. Alloy
 - ☐ 4. Amalgamation

Question ID : 630680309412
Option 1 ID : 6306801203801
Option 2 ID : 6306801203802
Option 3 ID : 6306801203804
Option 4 ID : 6306801203803
Status : Answered
Chosen Option : 4

Q.5 Select the most appropriate option to fill in the blanks.

Variation in mountain ecosystems allows humans ____ extract multiple benefits which include food, _____, water, carbon storage, agricultural pasture and _____ cycling. However, these environments remain vulnerable _____ both climate change and human intervention.

- Ans

✗ 1. for; building; nutrition; to

✗ 2. too; water; nutrition; in

✗ 3. to; clothes; nutrient; for

✓ 4. to; building materials; nutrient; to

Question ID : 630680309407

Option 1 ID : 6306801203782

Option 2 ID : 6306801203783

Option 3 ID : 6306801203784

Option 4 ID : 6306801203781

Status : Answered

Chosen Option : 3

Q.6 Select the most appropriate option that can substitute the underlined segment in the given sentence.

They reached the examination centre on time so as that they will get seated in the examination hall on time.

- Ans

✗ 1. as they might

✓ 2. that they might

✗ 3. in order that they would

✗ 4. as they will

Question ID : 630680309403

Option 1 ID : 6306801203767

Option 2 ID : 6306801203765

Option 3 ID : 6306801203768

Option 4 ID : 6306801203766

Status : Answered

Chosen Option : 2

Q.7 Select the sentence that INAPPROPRIATELY uses the given word.
Come

- Ans

✗ 1. Come on, you can do it.

✓ 2. I come yesterday to your office but it was locked.

✗ 3. Do you wish to come along for a walk?

✗ 4. Come this Friday, and we will have a grand party.

Question ID : 630680309402

Option 1 ID : 6306801203761

Option 2 ID : 6306801203763

Option 3 ID : 6306801203762

Option 4 ID : 6306801203764

Status : Answered

Chosen Option : 2

Q.8 Select the most appropriate option to fill in the blanks.

A failed ballistic missile _____ sparked panic in the _____ Korean city of Gangneung
_____ it crashed into the _____ and triggered a fire.

- Ans ☒ 1. launch; South; after; ground
☐ 2. launch; South; since; floor
☐ 3. fire; South; once; earth
☐ 4. launch; South; for; mud

Question ID : 630680309408
Option 1 ID : 6306801203787
Option 2 ID : 6306801203788
Option 3 ID : 6306801203785
Option 4 ID : 6306801203786
Status : Answered
Chosen Option : 1

Q.9 Select the most appropriate option to fill in the blank.
She has set _____.

- Ans ☐ 1. the minutes at the meeting
☒ 2. some difficult targets for us all
☐ 3. his goals in his career
☐ 4. a presentation to my colleagues

Question ID : 630680309401
Option 1 ID : 6306801203758
Option 2 ID : 6306801203760
Option 3 ID : 6306801203759
Option 4 ID : 6306801203757
Status : Answered
Chosen Option : 2

Q.10 Select the most appropriate option to fill in the blanks.

Mahendra Singh Dhoni embodies _____ great Indian dream of _____ small-town boy
who went _____ to become the world's _____ finisher and richest cricketer. Ranchi's
boy, Chennai's thala, India's most successful captain, Lieutenant Colonel of the
Territorial Army—there has been really no one like him. Dhoni is also said to be an
enigma, a contradiction, a complicated recluse who hates to over complicate the
game.

- Ans ☐ 1. the; the; on; nice
☐ 2. a; a; in; good
☒ 3. the; a; on; best
☐ 4. the; the; up; best

Question ID : 630680309406
Option 1 ID : 6306801203780
Option 2 ID : 6306801203778
Option 3 ID : 6306801203779
Option 4 ID : 6306801203777
Status : Answered
Chosen Option : 4

Q.11 Sentences of a paragraph are given below in jumbled order. Arrange the sentences in the correct order to form a meaningful and coherent paragraph.

- (1) On behalf of the school association, I want to thank everyone who helped make our annual day a huge success.
- (2) I also want to thank our beloved teachers and school staff who provided us timely support and encouragement.
- (3) Additionally, I want to express my gratitude to all our audience including students, parents and guardians for cheering our performers and organisers of the show.
- (4) First and foremost, I want to thank our amazing participants, who thrilled us with their awesome performances.
- (5) We truly thank each one of you, and your support means a lot to us.

- Ans

1. 14235

2. 54123

3. 14325

4. 51423

Question ID : 630680309405
 Option 1 ID : 6306801203773
 Option 2 ID : 6306801203776
 Option 3 ID : 6306801203774
 Option 4 ID : 6306801203775
 Status : Answered
 Chosen Option : 4

Q.12 Select the most appropriate meaning of the underlined proverb.

The CEO motivated his team saying that you cannot make omelette without breaking a few eggs. So they must be prepared to work hard.

- Ans

1. Be careful while handling problems.

2. Be prepared to do tough things in order to create or achieve something.

3. No pain no gain.

4. Accomplishing any task can be messy.

Question ID : 630680309404
 Option 1 ID : 6306801203772
 Option 2 ID : 6306801203770
 Option 3 ID : 6306801203771
 Option 4 ID : 6306801203769
 Status : Answered
 Chosen Option : 2

Q.13 Select the most appropriate ANTONYM of the given word.
Waylaid

- Ans

1. Ambush

2. Permit

3. Scupper

4. Lay off

Question ID : 630680309411
 Option 1 ID : 6306801203799
 Option 2 ID : 6306801203797
 Option 3 ID : 6306801203800
 Option 4 ID : 6306801203798
 Status : Not Answered
 Chosen Option : --

Q.14 Select the most appropriate **ANTONYM** of the given word.
Despondency

- Ans
- ☒ 1. Gloom
 - ☒ 2. Despair
 - ☒ 3. Elation
 - ☒ 4. Happy

Question ID : 630680309410
Option 1 ID : 6306801203795
Option 2 ID : 6306801203794
Option 3 ID : 6306801203793
Option 4 ID : 6306801203796
Status : Answered
Chosen Option : 4

Q.15 Select the most appropriate synonym of the underlined word.
Experts suggested translocation of the tiger, as it may kill other cattle again if released in the same area.

- Ans
- ☒ 1. Changed look
 - ☒ 2. Transfer of someone
 - ☒ 3. Movement of something from one place to another
 - ☒ 4. A movement

Question ID : 630680309414
Option 1 ID : 6306801203810
Option 2 ID : 6306801203811
Option 3 ID : 6306801203812
Option 4 ID : 6306801203809
Status : Answered
Chosen Option : 3

Q.16 Select the most appropriate synonym of the given word.
Flurry

- Ans
- ☒ 1. Surge
 - ☒ 2. Quick
 - ☒ 3. Soothe
 - ☒ 4. Fast

Question ID : 630680309413
Option 1 ID : 6306801203807
Option 2 ID : 6306801203806
Option 3 ID : 6306801203808
Option 4 ID : 6306801203805
Status : Answered
Chosen Option : 3

Comprehension:

Read the given passage and answer the question that follows.

‘AI (Artificial Intelligence) has come to be accepted as a boon for the next century. Everyone is going gaga over its capabilities and potential to make life easier and comfortable. But there is a need to pause and reflect on its flip side as well. Personalised feedback and instant answers might give a magical experience to students using ChatGPT, but where are they heading? They are acquiring the incapability to seek answers on their own, a lack of curiosity to explore, sitting on their couch for someone else to solve their problems. Is it correct? With the world getting more and more automised, there will be a rise in mental health disorders. Lack of social interactions, true companionship, a shoulder to pour out all sorts of mixed, confused feelings and emotions will create individuals who are like Facebook profiles—beautiful, appealing from outside but broken from inside. This dichotomy between the inner self and outer self will churn complex personalities, which is not healthy and promising for the future of this world. The students need a human touch.

SubQuestion No : 17

Q.17 Identify the tone of the passage given above .

- Ans
- ☒ 1. Pessimistic
 - ☒ 2. Optimistic
 - ☒ 3. Reflective
 - ☒ 4. Instructive

Question ID : 630680309398
Option 1 ID : 6306801203747
Option 2 ID : 6306801203748
Option 3 ID : 6306801203746
Option 4 ID : 6306801203745
Status : Answered
Chosen Option : 3

Comprehension:

Read the given passage and answer the question that follows.

‘AI (Artificial Intelligence) has come to be accepted as a boon for the next century. Everyone is going gaga over its capabilities and potential to make life easier and comfortable. But there is a need to pause and reflect on its flip side as well. Personalised feedback and instant answers might give a magical experience to students using ChatGPT, but where are they heading? They are acquiring the incapability to seek answers on their own, a lack of curiosity to explore, sitting on their couch for someone else to solve their problems. Is it correct? With the world getting more and more automised, there will be a rise in mental health disorders. Lack of social interactions, true companionship, a shoulder to pour out all sorts of mixed, confused feelings and emotions will create individuals who are like Facebook profiles—beautiful, appealing from outside but broken from inside. This dichotomy between the inner self and outer self will churn complex personalities, which is not healthy and promising for the future of this world. The students need a human touch.

SubQuestion No : 18

Q.18 What inference would you draw from the passage given above:

- Ans
- ☒ 1. AI will make people anti social
 - ☒ 2. AI can create mental disorders
 - ☒ 3. AI will replace humans
 - ☒ 4. AI will make people inhuman.

Question ID : 630680309396
Option 1 ID : 6306801203738
Option 2 ID : 6306801203740
Option 3 ID : 6306801203739
Option 4 ID : 6306801203737
Status : Answered
Chosen Option : 4

Comprehension:

Read the given passage and answer the question that follows.

'AI (Artificial Intelligence) has come to be accepted as a boon for the next century. Everyone is going gaga over its capabilities and potential to make life easier and comfortable. But there is a need to pause and reflect on its flip side as well. Personalised feedback and instant answers might give a magical experience to students using ChatGPT, but where are they heading? They are acquiring the incapability to seek answers on their own, a lack of curiosity to explore, sitting on their couch for someone else to solve their problems. Is it correct? With the world getting more and more automised, there will be a rise in mental health disorders. Lack of social interactions, true companionship, a shoulder to pour out all sorts of mixed, confused feelings and emotions will create individuals who are like Facebook profiles—beautiful, appealing from outside but broken from inside. This dichotomy between the inner self and outer self will churn complex personalities, which is not healthy and promising for the future of this world. The students need a human touch.

SubQuestion No : 19

Q.19 Read the given passage and identify the option that best gives the summary of the passage

- Ans ☒ 1. Personality development in future will be a big challenge.
- ☒ 2. AI holds big promise but it can never replace THE human touch
- ☒ 3. The future of world is bleak
- ☒ 4. AI holds promise for a bright future.

Question ID : 630680309397

Option 1 ID : 6306801203744

Option 2 ID : 6306801203742

Option 3 ID : 6306801203743

Option 4 ID : 6306801203741

Status : Answered

Chosen Option : 3

Comprehension:

Read the given passage and answer the question that follows.

‘AI (Artificial Intelligence) has come to be accepted as a boon for the next century. Everyone is going gaga over its capabilities and potential to make life easier and comfortable. But there is a need to pause and reflect on its flip side as well. Personalised feedback and instant answers might give a magical experience to students using ChatGPT, but where are they heading? They are acquiring the incapability to seek answers on their own, a lack of curiosity to explore, sitting on their couch for someone else to solve their problems. Is it correct? With the world getting more and more automised, there will be a rise in mental health disorders. Lack of social interactions, true companionship, a shoulder to pour out all sorts of mixed, confused feelings and emotions will create individuals who are like Facebook profiles—beautiful, appealing from outside but broken from inside. This dichotomy between the inner self and outer self will churn complex personalities, which is not healthy and promising for the future of this world. The students need a human touch.

SubQuestion No : 20

Q.20 Identify the central theme of the passage.

- Ans

✔

1. AI has to be harnessed very thoughtfully.

✘

2. Students should be banned from using AI-powered apps such as ChatGPT.

✘

3. AI in Education is very good.

✘

4. AI is the hope of the next century.

Question ID : 630680309395

Option 1 ID : 6306801203734

Option 2 ID : 6306801203736

Option 3 ID : 6306801203735

Option 4 ID : 6306801203733

Status : Answered

Chosen Option : 1

Section : Basic Computer Knowledge

Q.1 Match the columns.

Computer Units	Descriptions
(a) Output Unit	(i) This unit is used for storing data and instructions before and after processing.
(b) Processing Unit	(ii) This unit is used for storing the results.
(c) Storage Unit	(iii) This unit performs all the arithmetic and logical operations.

- Ans ☒ 1. (a)-(ii), (b)-(iii), (c)-(i)
- ☐ 2. (a)-(i), (b)-(iii), (c)-(ii)
- ☐ 3. (a)-(iii), (b)-(i), (c)-(ii)
- ☐ 4. (a)-(i), (b)-(ii), (c)-(iii)

Question ID : 630680296291
Option 1 ID : 6306801152832
Option 2 ID : 6306801152834
Option 3 ID : 6306801152835
Option 4 ID : 6306801152833
Status : Answered
Chosen Option : 1

Q.2 Which of the following is the file extension of MS Word 365 templates?

- Ans ☐ 1. .htm
- ☐ 2. .dotm
- ☒ 3. .dotx
- ☐ 4. .doc

Question ID : 630680296295
Option 1 ID : 6306801152851
Option 2 ID : 6306801152849
Option 3 ID : 6306801152848
Option 4 ID : 6306801152850
Status : Answered
Chosen Option : 4

Q.3 Match the columns.

Mobile Apps/Programs	Descriptions
(a) UMANG	(i) Government-to-Government (G2G) e-Governance initiative of the Karnataka State Government
(b) Mobile Seva AppStore	(ii) This application has seamless integration with core platforms such as DigiLocker, PayGov and Rapid Assessment System (RAS).
(c) KHAJANE	(iii) This mobile application (m-app) store facilitates hosting of suitable applications which can be downloaded and installed on mobile devices, for delivery of public services through mobile devices.

- Ans

✗ 1. (a)-(i), (b)-(ii), (c)-(iii)

✓ 2. (a)-(ii), (b)-(iii), (c)-(i)

✗ 3. (a)-(i), (b)-(iii), (c)-(ii)

✗ 4. (a)-(iii), (b)-(i), (c)-(ii)

Question ID : 630680296308

Option 1 ID : 6306801152901

Option 2 ID : 6306801152900

Option 3 ID : 6306801152902

Option 4 ID : 6306801152903

Status : Answered

Chosen Option : 2

Q.4 Which of the following are elements of the Windows XP operating system?

- i) Desktop
- ii) Icons
- iii) Menus
- iv) Gadgets

- Ans

✓ 1. Only i, ii and iii

✗ 2. Only i

✗ 3. Only i, ii and iv

✗ 4. Only ii, iii and iv

Question ID : 630680296292

Option 1 ID : 6306801152837

Option 2 ID : 6306801152836

Option 3 ID : 6306801152838

Option 4 ID : 6306801152839

Status : Answered

Chosen Option : 3

Q.5 Which of the following mission mode projects is a pan-India project, monitored and funded by the Department of Justice, Ministry of Law and Justice, Government of India for the District Courts across the country?

- Ans
- ☒ 1. e-District
 - ☒ 2. e-Office
 - ☒ 3. e-Courts
 - ☒ 4. e-Seva

Question ID : 630680296306
Option 1 ID : 6306801152895
Option 2 ID : 6306801152894
Option 3 ID : 6306801152892
Option 4 ID : 6306801152893
Status : Answered
Chosen Option : 3

Q.6 Identify whether the given statements are true or false.
i) In MS PowerPoint 365, the keyboard shortcut 'Ctrl + T' is used to open the Font dialog box.
ii) In MS PowerPoint 365, the keyboard shortcut 'Ctrl + M' is used to add a new slide.
iii) In MS PowerPoint 365, the keyboard shortcut 'Ctrl + Q' is used to close a PowerPoint presentation.

- Ans
- ☒ 1. i- False, ii-True, iii-True
 - ☒ 2. i- False, ii-True, iii- False
 - ☒ 3. i-True, ii-True, iii-True
 - ☒ 4. i- True, ii-False, iii-True

Question ID : 630680296303
Option 1 ID : 6306801152881
Option 2 ID : 6306801152883
Option 3 ID : 6306801152880
Option 4 ID : 6306801152882
Status : Answered
Chosen Option : 2

Q.7 ENIAC is acknowledged as the first successful high-speed EDC. What is the full form of EDC?

- Ans
- ☒ 1. Electronic Digital Computer
 - ☒ 2. Electrical Display Controller
 - ☒ 3. Electronic Data Convertor
 - ☒ 4. Electronic Digital Components

Question ID : 630680296289
Option 1 ID : 6306801152824
Option 2 ID : 6306801152827
Option 3 ID : 6306801152826
Option 4 ID : 6306801152825
Status : Answered
Chosen Option : 3

Q.8 Which of the following options are available under 'Compare' within the 'Compare' group in the Review menu, in Microsoft Word 365?

- i) Compare two versions of a document
- ii) Combine revisions from multiple authors into a single document
- iii) Spelling and Grammar
- iv) Check Accessibility
- v) Track Changes
- vi) Show Markup

- Ans

✔ 1. Only i and ii

✘ 2. i, ii, iii, iv, v and vi

✘ 3. Only iii, iv, v and vi

✘ 4. Only i, ii, iii and v

Question ID : 630680296296

Option 1 ID : 6306801152852

Option 2 ID : 6306801152855

Option 3 ID : 6306801152854

Option 4 ID : 6306801152853

Status : Answered

Chosen Option : 2

Q.9 Match the columns.

Windows XP commands	Descriptions
(a) Systeminfo	(i) Command to open Control Panel
(b) compmgmt.msc	(ii) Command to display detailed configuration information about a computer and its operating system, including operating system configuration, security information, product ID and hardware properties
(c) diskmgmt.msc	(iii) Command to open Computer Management
(d) control	(iv) Command to open Disk Management

- Ans

✔ 1. (a)-(ii), (b)-(iii), (c)-(iv), (d)-(i)

✘ 2. (a)-(i), (b)-(ii), (c)-(iv), (d)-(iii)

✘ 3. (a)-(ii), (b)-(i), (c)-(iii), (d)-(iv)

✘ 4. (a)-(iii), (b)-(i), (c)-(iv), (d)-(ii)

Question ID : 630680296294

Option 1 ID : 6306801152844

Option 2 ID : 6306801152845

Option 3 ID : 6306801152846


Option 4 ID : 6306801152847


Status : Not Answered


Chosen Option : --


Q.10 Identify whether the given statements are true or false.
i) In Windows XP, the taskbar is primarily used to switch between open windows and applications.
ii) Windows XP provides you with a desktop icon called the Recycle Bin, which stores deleted items.

- Ans

 1. i-True, ii-True

 2. i- False, ii-False

 3. i- True, ii-False

 4. i- False, ii-True

Question ID : 630680296293

Option 1 ID : 6306801152840

Option 2 ID : 6306801152843

Option 3 ID : 6306801152842

Option 4 ID : 6306801152841

Status : Answered

Chosen Option : 1

Q.11 Match the columns.

Terms in IT Act 2000	Definitions
(a) Digital signature	(i) Cell phones, personal digital assistance or a combination of both or any other device used to communicate, send or transmit any text, video, audio or image
(b) Electronic record	(ii) Authentication of any electronic record by a subscriber by means of an electronic method or procedure in accordance with the provisions of Section 3
(c) Public key	(iii) Data, record or data generated, image or sound stored, received or sent in an electronic form or microfilm or computer-generated microfiche

- Ans

 1. (a)-(i), (b)-(iii), (c)-(ii)

 2. (a)-(iii), (b)-(ii), (c)-(i)

 3. (a)-(iii), (b)-(i), (c)-(ii)

 4. (a)-(ii), (b)-(iii), (c)-(i)

Question ID : 630680296305

Option 1 ID : 6306801152890

Option 2 ID : 6306801152889

Option 3 ID : 6306801152891

Option 4 ID : 6306801152888

Status : Answered


Chosen Option : 2

Q.12 Which of the following icons represents 'Conditional Formatting' in MS Excel 365?


Ans

- ✗


1.


- ✓


2.


- ✗

3.


- ✗

4.



Question ID : 630680296300
Option 1 ID : 6306801152869
Option 2 ID : 6306801152868
Option 3 ID : 6306801152870
Option 4 ID : 6306801152871
Status : Answered
Chosen Option : 3

Q.13 When we go to File -> Print -> Settings -> Document Info in MS Word 365, we see the following options in the left-hand column of the given table. Match the given options with their respective descriptions.

Options under Document Info	Descriptions
(a) Key assignments	(i) List of styles used in your document
(b) List of markup	(ii) List of your custom shortcut keys
(c) Styles	(iii) Your tracked changes

Ans

- ✗

1.

(a)-(i), (b)-(ii), (c)-(iii)
- ✗

2.

(a)-(i), (b)-(iii), (c)-(ii)
- ✓

3.

(a)-(ii), (b)-(iii), (c)-(i)
- ✗

4.

(a)-(iii), (b)-(i), (c)-(ii)

Question ID : 630680296297
Option 1 ID : 6306801152857
Option 2 ID : 6306801152858
Option 3 ID : 6306801152856
Option 4 ID : 6306801152859
Status : Answered
Chosen Option : 3

Q.14 Which of the following is/are NOT the characteristic(s) of a computer?

- i) Storage
- ii) Diligence
- iii) Accuracy
- iv) Tiredness
- v) Speed

Ans ☒ 1. Only ii and iv
☒ 2. Only i, ii and iii
☒ 3. Only i, ii and v
☒ 4. Only iv

Question ID : 630680296290
 Option 1 ID : 6306801152831
 Option 2 ID : 6306801152829
 Option 3 ID : 6306801152830
 Option 4 ID : 6306801152828
 Status : Answered
 Chosen Option : 1

Q.15 Which MS Word letter-case has been applied over the phrase 'SINGLE cOMPUTER'?

- i) Capitalize each word
- ii) Upper case
- iii) Toggle case

Ans ☒ 1. Only ii
☒ 2. Only i
☒ 3. Only i and ii
☒ 4. Only iii

Question ID : 630680296298
 Option 1 ID : 6306801152861
 Option 2 ID : 6306801152860
 Option 3 ID : 6306801152863
 Option 4 ID : 6306801152862
 Status : Answered
 Chosen Option : 4

Q.16 Which of the following channels is/are used to deliver services through mobile phones under Mobile Seva Platform?

- i) SMS
- ii) IVRS
- iii) USSD
- iv) Post office

Ans ☒ 1. Only i, ii and iv
☒ 2. Only i, ii and iii
☒ 3. Only i
☒ 4. Only ii, iii and iv

Question ID : 630680296307
 Option 1 ID : 6306801152898
 Option 2 ID : 6306801152897
 Option 3 ID : 6306801152896
 Option 4 ID : 6306801152899
 Status : Answered
 Chosen Option : 2

Q.17 Identify whether the given statements are true or false.

i) In MS PowerPoint 365, the 'File' menu includes the options 'Save', 'Save As' and 'Share'.

ii) In MS PowerPoint 365, when the 'Save As' option is clicked, we are always asked for the location where the file needs to be saved.

- Ans
- ☒ 1. i- False, ii-True
 - ☒ 2. i- True, ii-False
 - ☒ 3. i- False, ii-False
 - ☒ 4. i-True, ii-True

Question ID : 630680310728
 Option 1 ID : 6306801209042
 Option 2 ID : 6306801209043
 Option 3 ID : 6306801209044
 Option 4 ID : 6306801209041
 Status : Answered
 Chosen Option : 4

Q.18 Which of the following file extensions is used to save an MS PowerPoint 365 macro-enabled presentation?

- Ans
- ☒ 1. .pps
 - ☒ 2. .pptx
 - ☒ 3. .pptm
 - ☒ 4. .xps

Question ID : 630680296302
 Option 1 ID : 6306801152879
 Option 2 ID : 6306801152877
 Option 3 ID : 6306801152876
 Option 4 ID : 6306801152878
 Status : Answered
 Chosen Option : 2

Q.19 Match the formulas in MS Excel 365 with their respective results.

Formulas	Results
(a) =REPT("sies",2)	(i) iessie
(b) =REPLACE("sies",2,2,"sies")	(ii) siessies
(c) =CONCAT("sies","sies","es")	(iii) ssiess
(d) =MID("siessies",2,6)	(iv) siessieses

- Ans ☒ 1. (a)-(ii), (b)-(iii), (c)-(iv), (d)-(i)
☐ 2. (a)-(iii), (b)-(i), (c)-(iv), (d)-(ii)
☐ 3. (a)-(i), (b)-(ii), (c)-(iv), (d)-(iii)
☐ 4. (a)-(ii), (b)-(i), (c)-(iii), (d)-(iv)

Question ID : 630680296301
Option 1 ID : 6306801152872
Option 2 ID : 6306801152875
Option 3 ID : 6306801152873
Option 4 ID : 6306801152874
Status : Not Answered
Chosen Option : --

Q.20 Identify whether the given statements are true or false.
i) In MS Excel 365, a worksheet can be renamed with the keyboard shortcut 'Alt + H > O > R', and then by typing the new name for the worksheet.
ii) In MS Excel 365, a worksheet can be renamed by double-clicking the sheet tab and then typing the new name for the worksheet.

- Ans ☐ 1. i-False, ii-True
☐ 2. i-False, ii-False
☐ 3. i-True, ii-False
☒ 4. i-True, ii-True

Question ID : 630680296299
Option 1 ID : 6306801152865
Option 2 ID : 6306801152867
Option 3 ID : 6306801152866
Option 4 ID : 6306801152864
Status : Not Answered
Chosen Option : --