

DSSSB PRT

Previous Year Paper

10 Nov 2018 Shift 3

(English)

Adda247

Test Prime

ALL EXAMS, ONE SUBSCRIPTION



80,000+
Mock Tests



**Personalised
Report Card**



**Unlimited
Re-Attempt**



600+
Exam Covered



20,000+ Previous
Year Papers



500%
Refund



ATTEMPT FREE MOCK NOW



GOVT. OF NCT OF DELHI
Delhi Subordinate Services Selection Board
FC-18, Institutional Area, Karkardooma, Delhi – 110092.
www.dsssb.delhigovt.nic.in

Participant ID:	
Participant Name:	
Test Center Name:	Ion Digital Zone IDZ1 Mundka
Test Date:	10/11/2018
Test Time:	4:30 PM - 6:30 PM
Subject:	ASSISTANT TEACHER PRIMARY

Section : Mental Ability

Q.1 Nithya's college bus is facing north when it reaches her college. After starting from Nithya's house, it turns right twice and then left before reaching the college. What direction was the bus facing when it left the bus stop in front of Nithya's house?

Question ID : 1626531229

- Ans
- ☒ 1. South
 - ☒ 2. North
 - ☒ 3. East
 - ☒ 4. West

Q.2 You are given two statements and two conclusions. Choose the comment about conclusion from the given options below.

Question ID : 1626531219

Statements:

- i) All hill stations have a sun-set point.
- ii) Village A is a hill station.

Conclusions:

- I. Village A has a sun-set point.
- II. Places other than hill stations do NOT have sun-set points.

- Ans
- ☒ 1. Only conclusion I follows
 - ☒ 2. Either I or II follows
 - ☒ 3. Only conclusion II follows
 - ☒ 4. Neither I nor II follows

Q.3 Introducing a girl, Naveen said, "This girl is the wife of the grandson of my mother". How is the girl related to Naveen?

Question ID : 1626531223

- Ans
- ☒ 1. Father-in-law
 - ☒ 2. Husband
 - ☒ 3. Father
 - ☒ 4. Grandfather

Q.4 Four students are sitting on a bench. Swathi is to the left of Reethu. Monika is to the right of Reethu. Ragavi is between Reethu and Monika. Who would be second from the left?

Question ID : 1626531238

- Ans
- ☒ 1. Ragavi
 - ☒ 2. Swathi
 - ☒ 3. Monika
 - ☒ 4. Reethu

Q.5 Select the option that is related to the 3rd number in the same way as the 2nd number is related to the 1st number.

Question ID : 1626531236

12 : 72 :: 16 : ?

- Ans
- ☒ 1. 182
 - ☒ 2. 256
 - ☒ 3. 84
 - ☒ 4. 128

Q.6

Question ID : 1626531228

Find the missing number for the following.

9	10	13	14
7	16	25	15
12	12	22	?
274	500	1278	1321

- Ans
- ☒ 1. 20
 - ☒ 2. 32
 - ☒ 3. 30
 - ☒ 4. 28

Q.7 If $E = 5$, $H = 8$ and $HAT = 29$, then $PAPER = ?$

Question ID : 1626531232

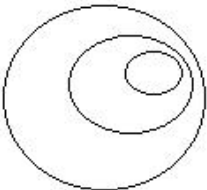


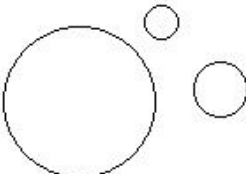
- Ans
- ☒ 1. 64
 - ☒ 2. 46
 - ☒ 3. 65
 - ☒ 4. 56

Q.8 In the following question, choose the venn diagram which best illustrates the relationship among three given items.

House, Kitchen, Bedroom

Question ID : 1626531237

Ans

- ☒ 1. 
- ☒ 2. 
- ☒ 3. 
- ☒ 4. 

Q.9 Arya is 8 ranks ahead of Surya who ranks 26th in a class of 42. What is Arya's rank from the last?

Question ID : 1626531226

- Ans
- ☒ 1. 25th
 - ☒ 2. 27th
 - ☒ 3. 23rd
 - ☒ 4. 26th

Q.10 Find the odd one out.

Question ID : 1626531221

- Ans
- ☒ 1. Aroma

- ☒ 2. Fragrance
☒ 3. Smell
☒ 4. Feel

Q.11 Choose the most appropriate alternative for the following.

Question ID : 1626531235

A disease always has _____.

- Ans ☒ 1. Nurse
☒ 2. Cure
☒ 3. Medicine
☒ 4. Cause

Q.12 Which term of the series 5, 10, 20, 40, 80, is 2560?

Question ID : 1626531224

- Ans ☒ 1. 11th
☒ 2. 10th
☒ 3. 8th
☒ 4. 9th

Q.13 You are given a question and two statements I and II. You have to decide whether the data provided in the statements are sufficient to answer the question.

Question ID : 1626531233

On which date of month was Harish born in February 2000?

Statements:

- I. Harish was born on an even date of the month.
 II. Harish's birth date was a prime number.

- Ans ☒ 1.
 Data in both statements I and II together are necessary to answer the question
☒ 2.
 Data in statement I alone is sufficient to answer the question
☒ 3.
 Data in both statements I and II together are not sufficient to answer the question
☒ 4.
 Data in statement II alone is sufficient to answer the question

Q.14 If $X > Y$, $Y > Z$ and $Z > W$, then which of the following conclusions is definitely wrong?

Question ID : 1626531231

- Ans ☒ 1. $W > A$
☒ 2. $A > Z$
☒ 3. $Y > W$
☒ 4. $A > W$

Q.15 Find the correct water image for the following word.

Question ID : 1626531220

HIDE

- Ans ☒ 1. EQIH
☒ 2. EDIH
☒ 3. HIDE
☒ 4. HIDE

Q.16 A cube is painted green on all faces. It is cut into 64 smaller cubes of equal size. How many cubes have no face painted?

Question ID : 1626531227

- Ans ☒ 1. 8
☒ 2. 16
☒ 3. 12

✗ 4. 10

Q.17 Choose the correct alternative for the following.

Question ID : 1626531234

Skeleton : Bone : Nerve

- Ans
- ✗ 1. Leave : Flower : Sand
 - ✓ 2. Eye : Retina : Pupil
 - ✗ 3. Sugar : Milk : Drink
 - ✗ 4. Snow : Cloud : Wind

Q.18 In a certain code language CHILDREN is written as BIHMCSDO, then how will CHOCOLATE be written in that code?

Question ID : 1626531225

- Ans
- ✗ 1. BINDNMZSD
 - ✓ 2. BINDNMZUD
 - ✗ 3. BINDNKZUD
 - ✗ 4. BINDNMBUD

Q.19 Two train tickets from city X to Y and three tickets from city X to Z cost ₹ 77 but three tickets from city X to Y and two tickets from city X to Z cost ₹ 73. What are the fares for cities Y and Z from X respectively?

Question ID : 1626531230

- Ans
- ✗ 1. ₹ 13, ₹ 15
 - ✓ 2. ₹ 13, ₹ 17
 - ✗ 3. ₹ 15, ₹ 13
 - ✗ 4. ₹ 14, ₹ 17

Q.20 In the following question, a word has been given, followed by four other words, one of which CANNOT be formed by using the letters of the given word. Find that word.

Question ID : 1626531222

INTERNATIONAL

- Ans
- ✗ 1. NATION
 - ✗ 2. ORIENTATION
 - ✓ 3. REACTION
 - ✗ 4. RATIONAL

Section : General Awareness

Q.1 _____ तब होता है जब एक प्राकृतिक पारिस्थितिक तंत्र की उत्पादकता संकटग्रस्त पर्यावरणीय क्षति के परिणामस्वरूप महत्वपूर्ण रूप से घटित होती है।

Question ID : 1626531250

- Ans
- ✗ 1. कृषि सूखा
 - ✗ 2. मृदा नमी सूखा
 - ✗ 3. जल विज्ञान सूखा
 - ✓ 4. पारिस्थितिक सूखा

Q.2 विश्व व्यापार संगठन का सचिवालय _____ में स्थित है।

Question ID : 1626531257

- Ans
- ✓ 1. जिनेवा
 - ✗ 2. वियना
 - ✗ 3. पेरिस
 - ✗ 4. न्यूयॉर्क

Q.3 The Indian Constitution has made some provisions for administration for states. Which one of the below is correctly matched?

Ans ☒ 1.

Article 371 C : Special provision with respect to the State of Manipur.

☒ 2.

Article 371 A : Special provision with respect to the State of Sikkim.

☒ 3.

Article 371 A : Special provision with respect to the State of Assam.

☒ 4.

Article 371 B : Special provision with respect to the State of Nagaland.

Question ID : 1626531242

Q.4 Which of the following pairs is correctly matched?

Question ID : 1626531240

Ans

☒ 1. Surat Split of Congress : 1908

☒ 2. Home Rule League : 1917

☒ 3. Bengal Partition : 1911

☒ 4. Lucknow Pact : 1916

Q.5 Which of the following statements regarding the Kakori Robbery is incorrect?

Question ID : 1626531239

Ans ☒ 1.

The members of the Hindustan Socialist Republic Association executed the robbery

☒ 2.

On 9 August 1925, ten men held up the 8-Down train at Kakori and looted its official railway cash

☒ 3.

Ashfaqulla Khan, Ramprasad Bismil, Roshan Singh and Rajendra Lahiri were hanged

☒ 4. None of the other options

Q.6 What is the full form of WPI?

Question ID : 1626531252

Ans

☒ 1. Wholesale Price Inflation

☒ 2. Wholesale Price Index

☒ 3. Wholesale Parameter Index

☒ 4. Wheat Production of India

Q.7 Who is NOT associated with tradition of Hindustani classical music?

Question ID : 1626531248

Ans

☒ 1. Ghulam Ali

☒ 2. Ustad Abdul Rehman Khan

☒ 3. Lakshmi Shankar

☒ 4. Purandara Dasa

Q.8 NALCO is a Navratna company under Govt. of India. Which of the following is TRUE about NALCO?

Question ID : 1626531258

Ans ☒ 1.

NALCO stands for National Aluminium Company Limited

☒ 2.

This company comes under the Ministry of Labour, Govt. of India

☒ 3. It was established in 2001

☒ 4. Its headquarter is located in Bhopal

Q.9 Who discovered the vitamins in 1912?

Question ID : 1626531253

Ans

☒ 1. Casimir Funk

☒ 2. McCollum

☒ 3. John Watson

☒ 4. Fredrick Miser

Q.10 Which state was formed first on the basis on language in independent India?

Question ID : 1626531241

- Ans
- ☒ 1. Karnataka
 - ☒ 2. West Bengal
 - ☒ 3. Punjab
 - ☒ 4. Andhra Pradesh

Q.11 When was Indian Space Research Organisation was established?

Question ID : 1626531256

- Ans
- ☒ 1. 1969
 - ☒ 2. 1957
 - ☒ 3. 1963
 - ☒ 4. 1974

Q.12 Which of the following statements is incorrect about upcoming Cricket World Cup (officially ICC Cricket World Cup)?

Question ID : 1626531245

- Ans
- ☒ 1. It will be hosted by Australia
 - ☒ 2.
- 12th edition of the Cricket World Cup is scheduled in 2019
- ☒ 3. The World Cup will feature 10 teams
 - ☒ 4. It is scheduled from 30 May to 14 July 2019

Q.13 Who is considered as the father of statistics in India?

Question ID : 1626531251

- Ans
- ☒ 1. R.C. Dutt
 - ☒ 2. Dadabhai Naoroji
 - ☒ 3. N.R. Madhav Menan
 - ☒ 4. Prasanta Chandra Mahalanobis

Q.14 The famous saying a government of laws and not of men is related to _____.

Question ID : 1626531244

- Ans
- ☒ 1. Directive Principles of State Policy
 - ☒ 2. Presidential Emergency
 - ☒ 3. Fundamental Rights
 - ☒ 4. Rights under Citizenship

Q.15 Below are pairs of famous sportspersons and the games they play. Which pair is incorrect?

Question ID : 1626531246

- Ans
- ☒ 1. Neelam Jaswant Singh : Wrestling
 - ☒ 2. Dingko Singh : Boxing
 - ☒ 3. Vijay Hazare : Cricket
 - ☒ 4. Koneru Humpi : Chess

Q.16 गोंडवानालैंड पेंजे का एक महत्वपूर्ण हिस्सा था जो हिमालय की उत्पत्ति से संबंधित था। गोंडवानालैंड के बारे में निम्नलिखित में से कौन सा कथन सत्य है?

Question ID : 1626531249

- Ans
- ☒ 1.
- गोंडवानालैंड में दक्षिण अफ्रीका, दक्षिण अमेरिका, ऑस्ट्रेलिया और न्यूजीलैंड शामिल थे
- ☒ 2.
- एशिया के दक्षिणी हिस्से को गोंडवानालैंड कहा जाता था
- ☒ 3.
- दक्षिण अमेरिका, अफ्रीका, दक्षिण भारत, ऑस्ट्रेलिया और अंटार्कटिका से बने पेंजे के दक्षिणी हिस्से को गोंडवानालैंड कहा जाता था

✗ 4.

पेंजे के उत्तरी भाग में वर्तमान उत्तरी अमेरिका और यूरेशिया शामिल थे जिन्हें गोंडवानालैंड कहा जाता था

Q.17 Which Bharat Ratna awardee was famous as a Carnatic classical vocalist?

Question ID : 1626531247

Ans

✗ 1. Bhimsen Joshi

✗ 2. Ravi Shankar

✗ 3. Bismillah Khan

✓ 4. M.S. Subbulakshmi

Q.18 Which one out of the following statements about Aryabhata Satellite is incorrect?

Question ID : 1626531255

Ans

✗ 1.

It was built to conduct experiments in X-ray astronomy, aeronomics and solar physics

✗ 2. Aryabhata was the first Indian Satellite

✗ 3.

It was made by Indian Space Research Organisation

✓ 4.

Aryabhata was launched from Satish Dhawan Space Centre, Sriharikota

Q.19 Bronze is an alloy of two metals, namely:

Question ID : 1626531254

Ans

✗ 1. Copper and Lead

✓ 2. Copper and Tin

✗ 3. Copper and Aluminum

✗ 4. Copper and Iron

Q.20 Which article of the Constitution provided the power to the Parliament to amend the Constitution and procedure?

Question ID : 1626531243

Ans

✗ 1. Article 226

✗ 2. Article 356

✗ 3. Article 108

✓ 4. Article 368

Section : Arithmetic Ability

Q.1 The digit in the unit's place in the number obtained after calculating $3^{53} - 6^{38} + 27^{56}$ is:

Question ID : 1626531260

Ans

✗ 1. 4

✗ 2. 2

✓ 3. 8

✗ 4. 6

Q.2 What is the sum of digits of the least number that should be subtracted from 625355 to make it a perfect square?

Question ID : 1626531261

Ans

✗ 1. 9

✗ 2. 12

✓ 3. 13

✗ 4. 15

Q.3 If 7 men working 7 hours a day earn ₹ 17,640 in 8 days, then 9 men working 8 hours a day in 10 days will earn how much money?

Question ID : 1626531274

Ans

✗ 1. ₹ 28,800

✗ 2. ₹ 35,280

✗ 3. ₹ 34,560

✓ 4. ₹ 32,400

Q.4 The value of $a \cdot 0.\overline{18} + 0.\overline{23} - 0.\overline{183}$ is:

Question ID : 1626531262

Ans ✓ 1. $0.\overline{237}$

✗ 2. $0.\overline{237}$

✗ 3. $0.\overline{327}$

✗ 4. $0.\overline{327}$

Q.5 A, B and C can complete a certain work in 10, 15 and 20 days respectively. B and C started the work but both left after 5 days. In how many days, A alone will complete the remaining work?

Question ID : 1626531273

Ans ✗ 1. $\frac{23}{6}$

✗ 2. $\frac{15}{4}$

✓ 3. $\frac{25}{6}$

✗ 4. $\frac{13}{3}$

Q.6 By selling 12 articles, a person gains cost price of 3 articles. What is his gain percent?

Question ID : 1626531268

Ans ✗ 1. 20%

✓ 2. 25%

✗ 3. 18%

✗ 4. $\frac{50}{3}\%$

Q.7 The diagonal of a rectangle is $8\sqrt{5}$ cm. If its perimeter is 48 cm, what is its area in cm^2 ?

Question ID : 1626531271

Ans ✓ 1. 128

✗ 2. $64\sqrt{5}$

✗ 3. 320

✗ 4. 160

Q.8 A train without stoppage travels at the speed of 90 km/h and with stoppage it travels at 78 km/h. How many minutes the train stops on an average per hour?

Question ID : 1626531276

Ans ✗ 1. 12

✗ 2. 9

✓ 3. 8

✗ 4. 10

Q.9 The value of a machine depreciates every year at the rate of 12% per annum. If the present value of the machine is ₹ 36,000, what is the percent decrease in its value at the end of two years?

Question ID : 1626531270

Ans ✗ 1. 30.45%

✗ 2. 36%

✓ 3. 22.56%

✗ 4. 24.38%

Q.10 An article is sold at a certain price. By selling it at $\frac{3}{4}$ of that price, one gains 8%. What is his gain percent at the original price?

Question ID : 1626531269

Ans ✗ 1. 40%

- ☒ 2. 36%
- ☒ 3. 44%
- ☒ 4. 30%

Q.11 A boat can go 15 km upstream and 50 km downstream in 6 hours. If speed of the stream is 2.5 km/h, what is the speed of boat in still water in km/h?

Question ID : 1626531275

- Ans ☒ 1. 10
- ☒ 2. 8
- ☒ 3. 9
- ☒ 4. 12

Q.12 Each edge of cube is increased by 40%. What is percent increase in its surface area?

Question ID : 1626531272

- Ans ☒ 1. 160%
- ☒ 2. 40%
- ☒ 3. 120%
- ☒ 4. 96%

Q.13 A sum of ₹ 4,342 is divided among A, B and C such that 2 times A's share, 5 times B's share and 6 times C's share are equal. What is the share of C?

Question ID : 1626531266

- Ans ☒ 1. ₹ 2,505
- ☒ 2. ₹ 835
- ☒ 3. ₹ 1,670
- ☒ 4. ₹ 1,002

Q.14 Two vessels A and B contains spirit and water in the ratio 3 : 8 and 6 : 5. Their contents are mixed in the ratio 1 : 2. What is the ratio of water and spirit in the new mixture?

Question ID : 1626531265

- Ans ☒ 1. 11 : 10
- ☒ 2. 6 : 5
- ☒ 3. 10 : 11
- ☒ 4. 5 : 6

Q.15 The HCF of two numbers is 18 and their sum is 270. If both are three digit numbers, what is sum of their reciprocals?

Question ID : 1626531263

- Ans ☒ 1. $\frac{5}{168}$
- ☒ 2. $\frac{15}{56}$
- ☒ 3. $\frac{5}{336}$
- ☒ 4. $\frac{15}{224}$

Q.16 The value of $\frac{138^2+156^2+194^2-138 \times 156+156 \times 194+194 \times 138}{(13.8)^3+(15.6)^3-(19.4)^3+13.8 \times 15.6 \times 58.2}$ is:

Question ID : 1626531259

- Ans ☒ 1. 1000
- ☒ 2. 10,000
- ☒ 3. 10
- ☒ 4. 100

Q.17 The average marks of 60 students of a class were found to be 64. Later, it was found that marks of two students were wrongly read as 42 and 28 in place of 24 and 76 respectively. Then what is the correct average marks?

Question ID : 1626531264

- Ans ☒ 1. 64.8

- ☒ 2. 64.4
☒ 3. 64.5
☒ 4. 64.2

Q.18 If numerator of a fraction is increased by 170% and denominator is decreased by 30%, it becomes $\frac{81}{14}$. What is the original fraction?

Question ID : 1626531267

Ans

- ☒ 1. $\frac{9}{14}$
☒ 2. $\frac{2}{5}$
☒ 3. $\frac{3}{7}$
☒ 4. $\frac{3}{2}$

Comprehension:

The following table gives the marks obtained by 200 students in a class test out of 80 marks. Read the table and answer the following questions.

Class Interval	10-20	20-30	30-40	40-50	50-60	60-70	70-80
No. of Students	20	28	32	40	36	28	16

SubQuestion No : 19

Q.19 If the given data is represented as Pie-chart, what is the central angle of the sector representing the median class to nearest whole degree?

Question ID : 1626531279

Ans

- ☒ 1. 57.6°
☒ 2. 64.8°
☒ 3. 72°
☒ 4. 50.4°

Comprehension:

The following table gives the marks obtained by 200 students in a class test out of 80 marks. Read the table and answer the following questions.

Class Interval	10-20	20-30	30-40	40-50	50-60	60-70	70-80
No. of Students	20	28	32	40	36	28	16

SubQuestion No : 20

Q.20 What is the mean marks obtained by students?

Question ID : 1626531278

Ans

- ☒ 1. 45.2
☒ 2. 44.6

✗ 3. 43.8

✗ 4. 44.8

Section : General English

Q.1 What is the ANTONYM of Waver?

Question ID : 1626531289

- Ans
- ✓ 1. Resolute
 - ✗ 2. Falter
 - ✗ 3. Dither
 - ✗ 4. Vacillate

Q.2 What is the ANTONYM of Appraise?

Question ID : 1626531293

- Ans
- ✓ 1. Neglect
 - ✗ 2. Evaluate
 - ✗ 3. Adjudge
 - ✗ 4. Calibrate

Q.3 Fill in the blank with the most appropriate word.

If you drop out of the school, party all the time and waste your life, you have chosen a _____ lifestyle.

Question ID : 1626531285

- Ans
- ✗ 1. decorous
 - ✗ 2. distinguished
 - ✗ 3. disguised
 - ✓ 4. dissolute

Q.4 Identify the sentence that is set in active voice.

Question ID : 1626531281

- Ans
- ✗ 1. The Veena was played by Naradhar.
 - ✗ 2. The Veena that Naradhar played.
 - ✗ 3. The Veena was played.
 - ✓ 4. Naradhar played the Veena.

Q.5 What is the ANTONYM of Indigent?

Question ID : 1626531291

- Ans
- ✗ 1. Impoverished
 - ✗ 2. Destitute
 - ✗ 3. Insolvent
 - ✓ 4. Affluent

Q.6 Choose the grammatically correct sentence from the below.

Question ID : 1626531283

- Ans
- ✗ 1.
I am going to get five orange, six apple and ten peach from the store.
 - ✗ 2.
I gonna get five oranges six apples and ten peach at the store.
 - ✗ 3.
I am gonna get five orange, six apple and ten peach at the store.
 - ✓ 4.
I am going to get five oranges, six apples and ten peaches from the store.

Q.7 If you feel chilly, you might close a window that is letting in a draught

Question ID : 1626531287

What does the word draught mean in the above sentence?

- Ans
- ☒ 1. A cold burst of wind
 - ☐ 2. A scorched spell
 - ☐ 3. A storm blowing from the sea
 - ☐ 4. A bout of aridness

Q.8 What is the SYNONYM of Epithet?

Question ID : 1626531290

- Ans
- ☐ 1. Trio
 - ☐ 2. Parable
 - ☒ 3. Nickname
 - ☐ 4. Thesis

Q.9 What is the SYNONYM of Condone?

Question ID : 1626531292

- Ans
- ☐ 1. Disallow
 - ☐ 2. Prohibit
 - ☒ 3. Excuse
 - ☐ 4. Forbid

Q.10 Choose the correct spelling from below.

Question ID : 1626531282

- Ans
- ☒ 1. Embarrassed
 - ☐ 2. Mysteries
 - ☐ 3. Unconscious
 - ☐ 4. Straight

Q.11 Choose the sentence with the correct punctuations.

Question ID : 1626531280

- Ans
- ☐ 1. "Help cried" Sita!
 - ☐ 2. Help! "cried Sita".
 - ☒ 3. "Help!" cried Sita.
 - ☐ 4. Help! "cried" Sita.

Q.12 Which of the following adjectives can be used to describe an extremely strong, powerful, vigorous, intense emotion or force?

Question ID : 1626531288

- Ans
- ☒ 1. Vehement
 - ☐ 2. Timorous
 - ☐ 3. Bashful
 - ☐ 4. Apathetic

Q.13 Fill in the blank with the most appropriate word.

Question ID : 1626531284

The giants are stomping and roaring to life, hurling their _____ bodies into each other's arms.

- Ans
- ☐ 1. sparse
 - ☒ 2. colossal
 - ☐ 3. infinitesimal
 - ☐ 4. thrift

Q.14

Question ID : 1626531286

The beautiful damsel wore a splendid dress with broad bands of dun alternated with narrow stripes of red.

What does the word dun mean in the above sentence?

Ans

- ☒ 1. Ornamentation
- ☒ 2. Decorative fabric
- ☒ 3. Colour or pigment
- ☒ 4. Bright embroidery

Q.15 What is the SYNONYM of Diligent?

Question ID : 1626531294

Ans

- ☒ 1. Elite
- ☒ 2. Slipshod
- ☒ 3. Slack
- ☒ 4. Meticulous

Comprehension:



Read the following passage and answer the questions that follow.

NEW DELHI: His seat belt tightly strapped to his body and his hands firmly on the steering wheel, Jai Kumar looks tense as he waits in a Maruti Ertiga at the Indira Gandhi International Airport. Today, a man's life depends on his driving skills – he has to transport a beating heart from the airport to All India Institute of Medical Sciences (AIIMS) where a transplant is scheduled in an hour.

The Delhi Traffic Police have arranged a 'green corridor' – a special route that will give Kumar an uninterrupted passage during the peak traffic hour in the morning. But still, there is no margin of error.

"I have driven in a green corridor once before, but I cannot get rid of the fear of getting stuck in a traffic jam," says Kumar. The conversation is cut short midway as a doctor carrying a heart in an organ preservation box hurriedly emerges from the airport and paces towards the waiting vehicle.

The route is not very different from a VIP movement corridor – a familiar irritant in Delhi – but causes barely five minutes of inconvenience to other motorists along the route. Escorted by three police vans and four motorcycles – sirens blaring constantly and traffic officers on the way frantically waving aside obstructing vehicles – the vehicle hits speeds of up to 100 km per hour to cover a 14km journey in 12 minutes.

In the end, a patient undergoes a successful heart transplant.

This is no longer a rare occurrence in the National Capital Region (NCR). What began with a celebrated 32 km journey in 29 minutes from a Gurgaon hospital to one in South Delhi's Okhla in January 2015 has now become a regular way of saving lives.

Since January 2017, traffic police have arranged 44 green corridors in Delhi at an average of over two such trips every month. "On each occasion, a life was saved," says Alok Kumar, Joint Commissioner of Police (Delhi Traffic Police), proud of the fact that every green corridor has been managed successfully.

Kumar says that never has a request for a green corridor been turned down. "We can arrange green corridors within 30 minutes of intimation. There is no margin for error," says Kumar.

These special corridors are necessary to transport organs such as hearts, livers, kidneys or eyes after harvesting them from a dying or brain-dead person to a patient in another hospital.

Time is of utmost importance in these transplants. A heart, for example, needs to be transplanted within four hours — the earlier the better, to improve the chances of success.

"It takes six-seven minutes to harvest a heart. Another two-three minutes are lost in placing the organ in a bag and rushing it to the ambulance. Transplanting the heart into the receiver's body takes 40-60 minutes. We have three hours for transporting the heart from one hospital to another, so we focus on saving time there," says Dr Kewal Krishan, Director of Heart Transplants at Max Super Speciality Hospital.

SubQuestion No : 16

Q.1 What is the main theme of the passage?

6

Question ID : 1626531296

Ans

✗ 1.

The importance of time in transplant of organs

✗ 2.

Transplanting heart and other organs

✓ 3.

Transporting organs at a fast pace by creating a green corridor

✗ 4.

Efficiency of Delhi police in transporting organs

Comprehension:



Read the following passage and answer the questions that follow.

NEW DELHI: His seat belt tightly strapped to his body and his hands firmly on the steering wheel, Jai Kumar looks tense as he waits in a Maruti Ertiga at the Indira Gandhi International Airport. Today, a man's life depends on his driving skills – he has to transport a beating heart from the airport to All India Institute of Medical Sciences (AIIMS) where a transplant is scheduled in an hour.

The Delhi Traffic Police have arranged a 'green corridor' – a special route that will give Kumar an uninterrupted passage during the peak traffic hour in the morning. But still, there is no margin of error.

"I have driven in a green corridor once before, but I cannot get rid of the fear of getting stuck in a traffic jam," says Kumar. The conversation is cut short midway as a doctor carrying a heart in an organ preservation box hurriedly emerges from the airport and paces towards the waiting vehicle.

The route is not very different from a VIP movement corridor – a familiar irritant in Delhi – but causes barely five minutes of inconvenience to other motorists along the route. Escorted by three police vans and four motorcycles – sirens blaring constantly and traffic officers on the way frantically waving aside obstructing vehicles – the vehicle hits speeds of up to 100 km per hour to cover a 14km journey in 12 minutes.

In the end, a patient undergoes a successful heart transplant.

This is no longer a rare occurrence in the National Capital Region (NCR). What began with a celebrated 32 km journey in 29 minutes from a Gurgaon hospital to one in South Delhi's Okhla in January 2015 has now become a regular way of saving lives.

Since January 2017, traffic police have arranged 44 green corridors in Delhi at an average of over two such trips every month. "On each occasion, a life was saved," says Alok Kumar, Joint Commissioner of Police (Delhi Traffic Police), proud of the fact that every green corridor has been managed successfully.

Kumar says that never has a request for a green corridor been turned down. "We can arrange green corridors within 30 minutes of intimation. There is no margin for error," says Kumar.

These special corridors are necessary to transport organs such as hearts, livers, kidneys or eyes after harvesting them from a dying or brain-dead person to a patient in another hospital.

Time is of utmost importance in these transplants. A heart, for example, needs to be transplanted within four hours — the earlier the better, to improve the chances of success.

"It takes six-seven minutes to harvest a heart. Another two-three minutes are lost in placing the organ in a bag and rushing it to the ambulance. Transplanting the heart into the receiver's body takes 40-60 minutes. We have three hours for transporting the heart from one hospital to another, so we focus on saving time there," says Dr Kewal Krishan, Director of Heart Transplants at Max Super Speciality Hospital.

SubQuestion No : 17

Q.1 What is the Delhi Police's role in the whole process?

Question ID : 1626531300

Ans

 1.

Creating and managing the green corridor for the ambulance

 2.

Blaring their sirens to cause inconvenience to motorists

 3.

Escorting the ambulance carrying the organ

 4.

Driving the ambulance carrying the organ

Comprehension:



Read the following passage and answer the questions that follow.

NEW DELHI: His seat belt tightly strapped to his body and his hands firmly on the steering wheel, Jai Kumar looks tense as he waits in a Maruti Ertiga at the Indira Gandhi International Airport. Today, a man's life depends on his driving skills – he has to transport a beating heart from the airport to All India Institute of Medical Sciences (AIIMS) where a transplant is scheduled in an hour.

The Delhi Traffic Police have arranged a 'green corridor' – a special route that will give Kumar an uninterrupted passage during the peak traffic hour in the morning. But still, there is no margin of error.

"I have driven in a green corridor once before, but I cannot get rid of the fear of getting stuck in a traffic jam," says Kumar. The conversation is cut short midway as a doctor carrying a heart in an organ preservation box hurriedly emerges from the airport and paces towards the waiting vehicle.

The route is not very different from a VIP movement corridor – a familiar irritant in Delhi – but causes barely five minutes of inconvenience to other motorists along the route. Escorted by three police vans and four motorcycles – sirens blaring constantly and traffic officers on the way frantically waving aside obstructing vehicles – the vehicle hits speeds of up to 100 km per hour to cover a 14km journey in 12 minutes.

In the end, a patient undergoes a successful heart transplant.

This is no longer a rare occurrence in the National Capital Region (NCR). What began with a celebrated 32 km journey in 29 minutes from a Gurgaon hospital to one in South Delhi's Okhla in January 2015 has now become a regular way of saving lives.

Since January 2017, traffic police have arranged 44 green corridors in Delhi at an average of over two such trips every month. "On each occasion, a life was saved," says Alok Kumar, Joint Commissioner of Police (Delhi Traffic Police), proud of the fact that every green corridor has been managed successfully.

Kumar says that never has a request for a green corridor been turned down. "We can arrange green corridors within 30 minutes of intimation. There is no margin for error," says Kumar.

These special corridors are necessary to transport organs such as hearts, livers, kidneys or eyes after harvesting them from a dying or brain-dead person to a patient in another hospital.

Time is of utmost importance in these transplants. A heart, for example, needs to be transplanted within four hours — the earlier the better, to improve the chances of success.

"It takes six-seven minutes to harvest a heart. Another two-three minutes are lost in placing the organ in a bag and rushing it to the ambulance. Transplanting the heart into the receiver's body takes 40-60 minutes. We have three hours for transporting the heart from one hospital to another, so we focus on saving time there," says Dr Kewal Krishan, Director of Heart Transplants at Max Super Speciality Hospital.

Put these steps of heart transplant in sequence.

- A. transporting the heart from one hospital to another
- B. harvesting the heart from a brain dead person
- C. transplanting the heart in the patient's body
- D. securing the heart in a safe box and rushing it to the ambulance

Ans

- ☒ 1. CABD
- ☒ 2. BDAC
- ☒ 3. DBCA
- ☒ 4. ABCD

Comprehension:



Read the following passage and answer the questions that follow.

NEW DELHI: His seat belt tightly strapped to his body and his hands firmly on the steering wheel, Jai Kumar looks tense as he waits in a Maruti Ertiga at the Indira Gandhi International Airport. Today, a man's life depends on his driving skills – he has to transport a beating heart from the airport to All India Institute of Medical Sciences (AIIMS) where a transplant is scheduled in an hour.

The Delhi Traffic Police have arranged a 'green corridor' – a special route that will give Kumar an uninterrupted passage during the peak traffic hour in the morning. But still, there is no margin of error.

"I have driven in a green corridor once before, but I cannot get rid of the fear of getting stuck in a traffic jam," says Kumar. The conversation is cut short midway as a doctor carrying a heart in an organ preservation box hurriedly emerges from the airport and paces towards the waiting vehicle.

The route is not very different from a VIP movement corridor – a familiar irritant in Delhi – but causes barely five minutes of inconvenience to other motorists along the route. Escorted by three police vans and four motorcycles – sirens blaring constantly and traffic officers on the way frantically waving aside obstructing vehicles – the vehicle hits speeds of up to 100 km per hour to cover a 14km journey in 12 minutes.

In the end, a patient undergoes a successful heart transplant.

This is no longer a rare occurrence in the National Capital Region (NCR). What began with a celebrated 32 km journey in 29 minutes from a Gurgaon hospital to one in South Delhi's Okhla in January 2015 has now become a regular way of saving lives.

Since January 2017, traffic police have arranged 44 green corridors in Delhi at an average of over two such trips every month. "On each occasion, a life was saved," says Alok Kumar, Joint Commissioner of Police (Delhi Traffic Police), proud of the fact that every green corridor has been managed successfully.

Kumar says that never has a request for a green corridor been turned down. "We can arrange green corridors within 30 minutes of intimation. There is no margin for error," says Kumar.

These special corridors are necessary to transport organs such as hearts, livers, kidneys or eyes after harvesting them from a dying or brain-dead person to a patient in another hospital.

Time is of utmost importance in these transplants. A heart, for example, needs to be transplanted within four hours — the earlier the better, to improve the chances of success.

"It takes six-seven minutes to harvest a heart. Another two-three minutes are lost in placing the organ in a bag and rushing it to the ambulance. Transplanting the heart into the receiver's body takes 40-60 minutes. We have three hours for transporting the heart from one hospital to another, so we focus on saving time there," says Dr Kewal Krishan, Director of Heart Transplants at Max Super Speciality Hospital.

What does Jaikumar, the driver of the Ambulance carrying a heart, fear the most?

Ans

✗ 1.

The ambulance may develop a snag and not start

✗ 2. The condition of the heart may deteriorate

✓ 3. He may get stuck in a traffic jam on the way

✗ 4. The police may erect barricades

Comprehension:



Read the following passage and answer the questions that follow.

NEW DELHI: His seat belt tightly strapped to his body and his hands firmly on the steering wheel, Jai Kumar looks tense as he waits in a Maruti Ertiga at the Indira Gandhi International Airport. Today, a man's life depends on his driving skills – he has to transport a beating heart from the airport to All India Institute of Medical Sciences (AIIMS) where a transplant is scheduled in an hour.

The Delhi Traffic Police have arranged a 'green corridor' – a special route that will give Kumar an uninterrupted passage during the peak traffic hour in the morning. But still, there is no margin of error.

"I have driven in a green corridor once before, but I cannot get rid of the fear of getting stuck in a traffic jam," says Kumar. The conversation is cut short midway as a doctor carrying a heart in an organ preservation box hurriedly emerges from the airport and paces towards the waiting vehicle.

The route is not very different from a VIP movement corridor – a familiar irritant in Delhi – but causes barely five minutes of inconvenience to other motorists along the route. Escorted by three police vans and four motorcycles – sirens blaring constantly and traffic officers on the way frantically waving aside obstructing vehicles – the vehicle hits speeds of up to 100 km per hour to cover a 14km journey in 12 minutes.

In the end, a patient undergoes a successful heart transplant.

This is no longer a rare occurrence in the National Capital Region (NCR). What began with a celebrated 32 km journey in 29 minutes from a Gurgaon hospital to one in South Delhi's Okhla in January 2015 has now become a regular way of saving lives.

Since January 2017, traffic police have arranged 44 green corridors in Delhi at an average of over two such trips every month. "On each occasion, a life was saved," says Alok Kumar, Joint Commissioner of Police (Delhi Traffic Police), proud of the fact that every green corridor has been managed successfully.

Kumar says that never has a request for a green corridor been turned down. "We can arrange green corridors within 30 minutes of intimation. There is no margin for error," says Kumar.

These special corridors are necessary to transport organs such as hearts, livers, kidneys or eyes after harvesting them from a dying or brain-dead person to a patient in another hospital.

Time is of utmost importance in these transplants. A heart, for example, needs to be transplanted within four hours — the earlier the better, to improve the chances of success.

"It takes six-seven minutes to harvest a heart. Another two-three minutes are lost in placing the organ in a bag and rushing it to the ambulance. Transplanting the heart into the receiver's body takes 40-60 minutes. We have three hours for transporting the heart from one hospital to another, so we focus on saving time there," says Dr Kewal Krishan, Director of Heart Transplants at Max Super Speciality Hospital.

How much maximum time do the doctors get to transport a heart from one hospital to the other?

- Ans
- ☒ 1. four hours
 - ☒ 2. three hours
 - ☒ 3. one hour
 - ☒ 4. half an hour

Section : General Hindi

Comprehension:

नीचे दिये गए गद्यांश को पढ़कर पूछे गये प्रश्नों के उत्तर दीजिए।

भारतेंदु युग में नाटक साहित्य ही प्रधान काव्य रूप बन गया था। किन्तु बाद में नाट्य-रचनाएँ कम हो गईं। इस क्षेत्र में जयशंकर प्रसाद ने महत्वपूर्ण कार्य किया। उनके नाटकों से हिन्दी साहित्य में बहुत बड़े अभाव की पूर्ति हुई। नाट्य-रचना का विधान प्राचीन काव्य शास्त्र में विस्तार से किया गया है। हिन्दी नाटककारों ने उस विधान को ज्यों का त्यों स्वीकार नहीं किया। नांदी, मंगलाचरण, प्रस्तावना को हटाया जाने लगा। विष्कंभक, प्रवेशक, आदि का विधान छोड़ दिया गया। विदूषक के बदले कोई मनोरंजक पात्र रखा जाने लगा। साँचे में ढल हुए पात्रों के स्थान पर निजी व्यक्तित्व की विशेषताओं से युक्त पात्र आने लगे।

SubQuestion No : 1

Q.1 'विदूषक' का अर्थ होता है:

Question ID : 1626531306

- Ans
- ☒ 1. मूर्ख
 - ☒ 2. घृणा फैलाने वाला व्यक्ति
 - ☒ 3. विद्वान
 - ☒ 4. हँसी उड़ाने वाला व्यक्ति

Comprehension:

नीचे दिये गए गद्यांश को पढ़कर पूछे गये प्रश्नों के उत्तर दीजिए।

भारतेंदु युग में नाटक साहित्य ही प्रधान काव्य रूप बन गया था। किन्तु बाद में नाट्य-रचनाएँ कम हो गईं। इस क्षेत्र में जयशंकर प्रसाद ने महत्वपूर्ण कार्य किया। उनके नाटकों से हिन्दी साहित्य में बहुत बड़े अभाव की पूर्ति हुई। नाट्य-रचना का विधान प्राचीन काव्य शास्त्र में विस्तार से किया गया है। हिन्दी नाटककारों ने उस विधान को ज्यों का त्यों स्वीकार नहीं किया। नांदी, मंगलाचरण, प्रस्तावना को हटाया जाने लगा। विष्कंभक, प्रवेशक, आदि का विधान छोड़ दिया गया। विदूषक के बदले कोई मनोरंजक पात्र रखा जाने लगा। साँचे में ढल हुए पात्रों के स्थान पर निजी व्यक्तित्व की विशेषताओं से युक्त पात्र आने लगे।

SubQuestion No : 2

Q.2 भारतेंदु युग में साहित्य का प्रधान रूप क्या हो गया था?

Question ID : 1626531302

- Ans
- ☒ 1. कहानी
 - ☒ 2. निबंध
 - ☒ 3. नाटक
 - ☒ 4. उपन्यास

Comprehension:

नीचे दिये गए गद्यांश को पढ़कर पूछे गये प्रश्नों के उत्तर दीजिए।

भारतेंदु युग में नाटक साहित्य ही प्रधान काव्य रूप बन गया था। किन्तु बाद में नाट्य-रचनाएँ कम हो गईं। इस क्षेत्र में जयशंकर प्रसाद ने महत्वपूर्ण कार्य किया। उनके नाटकों से हिन्दी साहित्य में बहुत बड़े अभाव की पूर्ति हुई। नाट्य-रचना का विधान प्राचीन काव्य शास्त्र में विस्तार से किया गया है। हिन्दी नाटककारों ने उस विधान को ज्यों का त्यों स्वीकार नहीं किया। नांदी, मंगलाचरण, प्रस्तावना को हटाया जाने लगा। विष्कंभक, प्रवेशक, आदि का विधान छोड़ दिया गया। विदूषक के बदले कोई मनोरंजक पात्र रखा जाने लगा। साँचे में ढल हुए पात्रों के स्थान पर निजी व्यक्तित्व की विशेषताओं से युक्त पात्र आने लगे।

SubQuestion No : 3

Q.3 भारतेंदु के बाद नाटक के क्षेत्र में महत्वपूर्ण कार्य किसका है?

Question ID : 1626531303

- Ans
- ☒ 1. रामचन्द्र शुक्ल
 - ☒ 2. महावीरप्रसाद दत्त

✗ 3. प्रेमचंद

✓ 4. जयशंकर प्रसाद

Comprehension:

नीचे दिये गए गद्यांश को पढ़कर पूछे गये प्रश्नों के उत्तर दीजिए।

भारतेंदु युग में नाटक साहित्य ही प्रधान काव्य रूप बन गया था। किन्तु बाद में नाट्य-रचनाएँ कम हो गईं। इस क्षेत्र में जयशंकर प्रसाद ने महत्वपूर्ण कार्य किया। उनके नाटकों से हिन्दी साहित्य में बहुत बड़े अभाव की पूर्ति हुई। नाट्य-रचना का विधान प्राचीन काव्य शास्त्र में विस्तार से किया गया है। हिन्दी नाटककारों ने उस विधान को ज्यों का त्यों स्वीकार नहीं किया। नांदी, मंगलाचरण, प्रस्तावना को हटाया जाने लगा। विष्कंभक, प्रवेशक, आदि का विधान छोड़ दिया गया। विदूषक के बदले कोई मनोरंजक पात्र रखा जाने लगा। साँचे में ढल हुए पात्रों के स्थान पर निजी व्यक्तित्व की विशेषताओं से युक्त पात्र आने लगे।

SubQuestion No : 4

Q.4 हिन्दी नाटक के संदर्भ में कौन सा कथन गलत है?

Question ID : 1626531304

Ans ✗ 1. निजी व्यक्तित्व से युक्त पात्र आने लगे।

✗ 2. प्रवेशक आदि का विधान छोड़ा गया।

✗ 3. मंगलाचरण, प्रस्तावना को हटाया जाने लगा।

✓ 4.

प्राचीन काव्यशास्त्र के विधान को ज्यों का त्यों स्वीकार किया।

Comprehension:

नीचे दिये गए गद्यांश को पढ़कर पूछे गये प्रश्नों के उत्तर दीजिए।

भारतेंदु युग में नाटक साहित्य ही प्रधान काव्य रूप बन गया था। किन्तु बाद में नाट्य-रचनाएँ कम हो गईं। इस क्षेत्र में जयशंकर प्रसाद ने महत्वपूर्ण कार्य किया। उनके नाटकों से हिन्दी साहित्य में बहुत बड़े अभाव की पूर्ति हुई। नाट्य-रचना का विधान प्राचीन काव्य शास्त्र में विस्तार से किया गया है। हिन्दी नाटककारों ने उस विधान को ज्यों का त्यों स्वीकार नहीं किया। नांदी, मंगलाचरण, प्रस्तावना को हटाया जाने लगा। विष्कंभक, प्रवेशक, आदि का विधान छोड़ दिया गया। विदूषक के बदले कोई मनोरंजक पात्र रखा जाने लगा। साँचे में ढल हुए पात्रों के स्थान पर निजी व्यक्तित्व की विशेषताओं से युक्त पात्र आने लगे।

SubQuestion No : 5

Q.5 दिए गए गद्यांश में 'विधान' का आशय है:

Question ID : 1626531305

- Ans
- ✓ 1. रचना- प्रणाली
 - ✗ 2. रंगमंच
 - ✗ 3. प्रयोजन
 - ✗ 4. भाग्य

Q.6 'आर्द्र' का विलोम होगा:

Question ID : 1626531318

- Ans
- ✗ 1. उष्ण
 - ✗ 2. शीत
 - ✗ 3. शीतोष्ण
 - ✓ 4. शुष्क

Q.7 'समक्ष' में कौन सा समास है?

Question ID : 1626531313

- Ans
- ✓ 1. अव्ययीभाव
 - ✗ 2. तत्पुरुष
 - ✗ 3. द्विगु
 - ✗ 4. द्वंद्व

Q.8 'आदरणीय' शब्द में प्रत्यय है:

Question ID : 1626531316

- Ans
- ✓ 1. नीय
 - ✗ 2. णीय
 - ✗ 3. अनीय
 - ✗ 4. य

Q.9 'उदय' का संधि विच्छेद होगा:

Question ID : 1626531312

- Ans
- ✗ 1. उद् + य
 - ✗ 2. उद् + अय
 - ✓ 3. उत् + अय
 - ✗ 4. उत् + य

Q.10 'संस्कृत' शब्द में उपसर्ग है:

Question ID : 1626531315

- Ans
- ✓ 1. सम्
 - ✗ 2. स
 - ✗ 3. सन्
 - ✗ 4. कृत

Q.11 'इसने मुक्तहस्त से धन लुटाया।' वाक्य में अशुद्ध अंश है:

Question ID : 1626531320

- Ans
- ✗ 1. इसने
 - ✗ 2. लुटाया।

✓ 3. मुक्तहस्त से

✗ 4. धन

Q.12 'जो सबके आगे रहता हो' के लिए एक शब्द होगा:

Question ID : 1626531319

Ans ✗ 1. अग्रिम

✗ 2. अग्रज

✓ 3. अग्रणी

✗ 4. अग्रगण्य

Q.13 निम्नलिखित में कौन सा शब्द तद्रव है?

Question ID : 1626531308

Ans ✗ 1. छिद्र

✗ 2. यदा

✓ 3. छिलका

✗ 4. जटा

Q.14 'तालाब' का पर्यायवाची निम्नलिखित में से कौन सा नहीं है?

Question ID : 1626531317

Ans ✗ 1. पद्माकर

✗ 2. तड़ाग

✗ 3. पुष्कर

✓ 4. रत्नाकर

Q.15 'चढ़ाई' किस प्रकार की संज्ञा है?

Question ID : 1626531310

Ans ✗ 1. पदार्थवाचक

✗ 2. व्यक्तिवाचक

✓ 3. भाववाचक

✗ 4. जातिवाचक

Q.16 निम्नलिखित में कौन सा शब्द देशज है?

Question ID : 1626531309

Ans ✗ 1. कमिश्नर

✗ 2. आसार

✓ 3. खखरा

✗ 4. आवाज

Q.17 निम्नलिखित में से कौन सा शब्द स्त्रीलिंग है?

Question ID : 1626531314

Ans ✗ 1. संचय

✓ 2. संस्था

✗ 3. संयोग

✗ 4. संचार

Q.18 निम्नलिखित में वर्तनी की दृष्टि से शुद्ध शब्द कौन सा है?

Question ID : 1626531321

Ans ✓ 1. नूपुर

- ☐ 2. नूपूर
- ☐ 3. नुपुर
- ☐ 4. नुपूर

Q.19 'गहरा' किस प्रकार का विशेषण है?

Question ID : 1626531311

- Ans ☐ 1. संख्यावाचक
- ☐ 2. परिमाण वाचक
- ☒ 3. गुणवाचक
- ☐ 4. सार्वनामिक

Q.20 निम्नलिखित में तत्सम शब्द कौन सा है?

Question ID : 1626531307

- Ans ☐ 1. दूध
- ☐ 2. दूजा
- ☐ 3. दूना
- ☒ 4. दुर्बल

Section : Subject Related

Q.1 Which statement supports the constructivist approach in learning?

Question ID : 1626531328

- Ans ☐ 1. Students cannot focus on the interrelationship among concepts.
- ☐ 2. Students cannot connect new ideas from previous knowledge.
- ☐ 3. Knowledge is passively received from the environment.
- ☒ 4. Knowledge is actively constructed by student.

Q.2 Personality is the function of:

Question ID : 1626531341

- Ans ☐ 1. heredity alone
- ☐ 2. family and culture
- ☐ 3. environment alone
- ☒ 4. heredity and environment

Q.3 The first theory of intelligence was a :

Question ID : 1626531337

- Ans ☒ 1. single-factor theory
- ☐ 2. two-factor theory
- ☐ 3. multifactor theory
- ☐ 4. three-factor theory

Q.4 _____ helps a teacher to become conversant with the objectives, classroom management and evaluation strategies.

Question ID : 1626531322

- Ans ☐ 1. Psychological analysis

- ☒ 2. Sociological analysis
- ☒ 3. Anthropological analysis
- ☒ 4. Pedagogical analysis

Q.5 Why is intrinsic motivation better than extrinsic motivation?

Question ID : 1626531323

- Ans
- ☒ 1. Children learn due to fear.
 - ☒ 2. Promotes peer learning.
 - ☒ 3. It accelerates self-learning.
 - ☒ 4. Increases student discipline.

Q.6 The period of 'industry vs inferiority' given by Erickson is influenced by:

Question ID : 1626531335

- Ans
- ☒ 1. society
 - ☒ 2. the home environment
 - ☒ 3. the school environment
 - ☒ 4. guardians

Q.7 When a child watches a nature documentary the child may discover new animals and adds them to the existing group of animals in his memory. This is called:

Question ID : 1626531334

- Ans
- ☒ 1. schema
 - ☒ 2. accommodation
 - ☒ 3. assimilation
 - ☒ 4. equilibration

Q.8 According to Thorndike a child should NOT be forced to learn. He called this as the:

Question ID : 1626531331

- Ans
- ☒ 1. law of effect
 - ☒ 2. law of cause and effect
 - ☒ 3. law of exercise
 - ☒ 4. law of readiness

Q.9 If a child from non-English language medium of instructions changes to the English medium, she/he experiences difficulty in learning. This is called:

Question ID : 1626531339

- Ans
- ☒ 1. negative transfer of learning
 - ☒ 2. positive transfer of learning
 - ☒ 3. zero transfer of learning
 - ☒ 4. learning is not transferred

Q.10 In the teacher-centred approach of education, discipline is:

Question ID : 1626531326

- Ans
- ☒ 1. shared
 - ☒ 2. imposed
 - ☒ 3. self-controlled
 - ☒ 4. participatory

Q.11 According to Piaget's cognitive development theory the approximate age for Pre Operational stage is:

Question ID : 1626531325

- Ans
- ☒ 1. 7 – 12 years
 - ☒ 2. 2 – 7 years
 - ☒ 3. 12 – 14 years

✗ 4. 0 – 2 years

Q.12 It is observed that a child is NOT able to do a task independently but completes it with the assistance of an adult. This is called:

Question ID : 1626531330

- Ans
- ✗ 1. the zone of influence
 - ✗ 2. the zone of adult involvement
 - ✗ 3. external influence
 - ✓ 4. the zone of proximal development

Q.13 सीखने के लिए _____ महत्वपूर्ण है।

Question ID : 1626531336

- Ans
- ✗ 1. सज़ा
 - ✗ 2. पुरस्कार
 - ✓ 3. प्रेरणा
 - ✗ 4. प्रशंसा

Q.14 सहकारी शिक्षा में क्या होता है?

Question ID : 1626531327

- Ans
- ✓ 1. छात्र समूहों में काम करते हैं।
 - ✗ 2. छात्र व्यावसायिकों के साथ काम करते हैं।
 - ✗ 3. छात्र समुदाय के साथ काम करते हैं।
 - ✗ 4. छात्र व्यक्तिगत रूप से काम करते हैं।

Q.15 Which law states that learning can only take place when a student is ready to learn?

Question ID : 1626531324

- Ans
- ✓ 1. Law of readiness
 - ✗ 2. Law of exercise
 - ✗ 3. Law of effect
 - ✗ 4. Law of use and disuse

Q.16 According to Piaget, problem solving ability develops in:

Question ID : 1626531333

- Ans
- ✗ 1. the sensory motor period
 - ✓ 2. the formal operational period
 - ✗ 3. the concrete operational period
 - ✗ 4. the pre-operational period

Q.17 Reinforcement to the students should be given:

Question ID : 1626531332

- Ans
- ✗ 1. at the end of the day
 - ✗ 2. in front of other teachers
 - ✓ 3. after the desirable behaviour is exhibited
 - ✗ 4. in the morning assembly

Q.18 Teaching methods like discovery method and activity method develop:

Question ID : 1626531340

- Ans
- ✗ 1. intelligent thinking
 - ✓ 2. divergent thinking
 - ✗ 3. convergent thinking

✗ 4. convergent and divergent thinking

Q.19 An infant starts crying when her grandmother tries to take her from her mother's lap. The child cries because of:

Question ID : 1626531329

- Ans
- ✗ 1. emotional anxiety
 - ✓ 2. separation anxiety
 - ✗ 3. stranger anxiety
 - ✗ 4. attachment

Q.20 The theory of moral judgement was put forward by:

Question ID : 1626531338

- Ans
- ✗ 1. Kohler
 - ✗ 2. Thorndike
 - ✓ 3. Lawrence Kohlberg
 - ✗ 4. Skinner

Section : Subject Related

Q.1 _____ बच्चों के सबसे अधिकारविहीन और बहिष्कृत समूहों में से हैं। नियमित रूप से, उन्हें गुणवत्ता शिक्षा (इन्स्यू.एच.ओ. और विश्व बैंक, 2011) के अधिकार से वंचित किया गया है।

Question ID : 1626531355

- Ans
- ✗ 1. जनजातीय बच्चे
 - ✗ 2. लड़कियां
 - ✗ 3. निम्न सामाजिक-आर्थिक पृष्ठभूमि वाले बच्चे
 - ✓ 4. विकलांग बच्चे

Q.2 Consider the following options and select the best option.
The aims and objectives of contemporary Indian society are:

Question ID : 1626531346

- a. Increasing productivity
- b. Social and national integration
- c. Acceleration the process of modernization
- d. Developing social, moral and spiritual values

- Ans
- ✗ 1. a, b, c and not d
 - ✗ 2. a, c, d and not b
 - ✓ 3. a, b, c and d
 - ✗ 4. a, b, d and not c

Q.3 पाठ्यक्रम में क्या समाविष्ट है?

Question ID : 1626531356

- Ans
- ✗ 1. शिक्षण गतिविधियां, सामग्री, विषय-वस्तु
 - ✓ 2. विषय-वस्तु, विधियां, गतिविधियां, संसाधन
 - ✗ 3. विषय-वस्तु, सामग्री, गतिविधियां, शिक्षक
 - ✗ 4. शिक्षण विधियां, सामग्री, छात्र

Q.4

Question ID : 1626531348

_____ has endorsed the provisions, prescribed as.

- Equal access to education for women and girls
- Special measures will be taken to eliminate discrimination
- Universalise education
- Eradicate illiteracy

Ans ☒ 1.

The National Policy of Empowerment of Women, 2001

- ☒ 2. The National Policy of Education, 1986
- ☒ 3. The Right to Education
- ☒ 4. The Women Empowerment Policy

Q.5 Which of the following is correct response about outcomes and objectives?

Question ID : 1626531358

Ans ☒ 1.

Objectives and outcomes should be achievable.

☒ 2.

Objectives and outcomes should be measurable.

☒ 3.

Objectives should be measurable and outcomes should be achievable.

☒ 4.

Outcomes should be measurable and objectives should be achievable.

Q.6 शिक्षक के रूप में आपकी भूमिका के लिए प्रभावी शिक्षण शिक्षा के लिए क्या होगी?

Question ID : 1626531343

Ans

☒ 1. छात्रों को अनुशासित करना

☒ 2. कक्षा को व्यवस्थित करना

☒ 3. व्यावहारिक शिक्षण का उपयोग करना

☒ 4. पाठ योजना तैयार करना

Q.7 _____ की प्रणाली जैसे राजनीतिक स्थिति, वर्ग, जातीयता, शारीरिक और मानसिक विकलांगता, आयु और अधिक, लिंग भूमिकाओं को संशोधित करती है।

Question ID : 1626531350

Ans

☒ 1. सामाजिक विभाजन

☒ 2. सामाजिक भेदभाव

☒ 3. सामाजिक बदलाव

☒ 4. सामाजिकता गतिशीलता

Q.8 Which of the following is important aspect in communication through technology?

Question ID : 1626531360

Ans

☒ 1. Receiver

☒ 2. Sender

☒ 3. Feedback

☒ 4. Message

Q.9 The term _____ represent approaches that focus on opening access to education and training provision, freeing learners from the constraints of time and place, and offering flexible learning opportunities to individuals and groups of learners.

Question ID : 1626531349

Ans

☒ 1. distance and continuing education

☒ 2. online learning

☒ 3. open learning and distance education

☒ 4. virtual learning

Q.10 The Rehabilitation Council of India (RCI) Act (1992) passed in the Parliament, was created to regulate manpower development programmes in the field of _____.

Question ID : 1626531353

- Ans
- ☒ 1. education for orphans
 - ☒ 2. education for individuals with special needs
 - ☒ 3. education for delinquents
 - ☒ 4. education for tribals

Q.11 The main postulates of the _____ (Equal Opportunities, Protection of Rights and Full Participation) Act.

Question ID : 1626531354

- Ans
- ☒ 1. Education for All
 - ☒ 2. The Persons with Disabilities
 - ☒ 3. Right to Education
 - ☒ 4. Discrimination in Education

Q.12 _____ डिस्टेंस (स्थान) मोड, समय, गति और अध्ययन के तरीके का चयन करने के लिए दूरस्थ-शिक्षा मोड के छात्रों के लिए यह संभव बनाता है।

Question ID : 1626531345

- Ans
- ☒ 1. शिक्षा का अधिकार
 - ☒ 2. लचीली शिक्षा
 - ☒ 3. दो तरफा संचार
 - ☒ 4. तकनीकी मध्यस्थता

Q.13 कौन सी रणनीतियां लड़कियों को अधिक सामाजिक और आर्थिक रूप से सशक्त बनाने के लिए उन की शिक्षा में मदद करती हैं?

Question ID : 1626531347

- Ans
- ☒ 1. भोजन, फीस संरचना संशोधन, वित्तीय लाभ प्रदान करना
 - ☒ 2. पारिवारिक शिक्षा, सह-शिक्षा, वित्तीय और शारीरिक सुविधाएं प्रदान करना
 - ☒ 3. निः शुल्क और अनिवार्य शिक्षा, शारीरिक सुविधाएं, महिला शिक्षकों की नियुक्ति
 - ☒ 4. माता-पिता को शिक्षित करना, सेवाओं का समर्थन करना, शुल्क में कमी

Q.14 Arrange the curriculum design process from following points as per the logical sequence.

Question ID : 1626531357

- Ans
- ☒ 1. Content planning, objectives, methodology, assessment, evaluation, feedback
 - ☒ 2. Objectives, methodology, assessments, evaluation, feedback, content planning
 - ☒ 3. Content planning, objectives, assessment, methodology, evaluation, feedback
 - ☒ 4. Objectives, content planning, methodology, assessments, evaluation, feedback

Q.15 What is full form of MOOC?

Question ID : 1626531361

- Ans
- ☒ 1. Massive Open Online Content
 - ☒ 2. Massive Online Open Communication
 - ☒ 3. Mass Open Optimal Communication
 - ☒ 4. Massive Online Open Course

Q.16 सच्ची शिक्षा का असली उद्देश्य क्या है?

Question ID : 1626531342

Ans

✗ 1. अच्छे चरित्र को विकसित करना

✓ 2.

शरीर और दिमाग के बीच समन्वय और सद्भाव विकसित करना

✗ 3.

सांस्कृतिक प्रशंसा और सांस्कृतिक रूप से संबंधित प्रतिभा विकसित करना

✗ 4.

अच्छे स्वास्थ्य, सुरक्षा, दृष्टिकोण और आदतों को विकसित करना

Q.17 At the secondary stage, the state governments should adopt and vigorously implement, the three language formula. This recommendation was given by the _____.

Question ID : 1626531344

Ans

✗ 1. NCF

✗ 2. Kothari commission

✓ 3. NPE

✗ 4. Education Commission

Q.18 _____ is an effective strategy of instructional approach that embraces the needs of academically diverse populations of students, in particular students who are gifted or who have disabilities.

Question ID : 1626531351

Ans

✗ 1. Modified instruction

✓ 2. Differentiated instruction

✗ 3. Remedial instruction

✗ 4. Individualised instruction

Q.19 _____ is a process that helps to overcome barriers limiting the presence, participation and achievement of learners.

Question ID : 1626531352

Ans

✗ 1. segregation

✗ 2. mainstreaming

✗ 3. integration

✓ 4. inclusion

Q.20 What is the requirement of curriculum development?

Question ID : 1626531359

Ans

✗ 1.

To change the old curriculum and implement new practices in it

✗ 2.

To follow the norms given by education commissions

✗ 3.

To meet global standards for employability of students

✓ 4.

To know the needs of changing society and provide education for sustainable development

Section : Subject Related

Q.1 Which of the following is NOT applicable to internet safety?

Question ID : 1626531363

Ans

✗ 1. Changing passwords regularly

✓ 2. Updating status during picnic

✗ 3. Child lock system

✗ 4. Use of antivirus software

Q.2 भाषा _____ मुखर प्रतीकों का प्रतीक है।

Question ID : 1626531378

Ans

- ☐ 1. आदर्श
- ☐ 2. ऐच्छिक
- ☐ 3. भावना
- ☒ 4. एकपक्षीय

Q.3 Multiple choice test is an example of:

Question ID : 1626531368

- Ans
- ☐ 1. Intelligent thinking
 - ☐ 2. Random thinking
 - ☒ 3. Convergent thinking
 - ☐ 4. Divergent thinking

Q.4 Four year old Ria could fluently speak Bengali other than Hindi, her mother tongue. Nobody spoke Bengali at home except for two maids at the day care she went to. How did Ria learn to speak Bengali?

Question ID : 1626531373

- Ans
- ☐ 1. She was taught at the day care
 - ☐ 2. Her friends taught her
 - ☐ 3. The maids at the day care taught her
 - ☒ 4. She picked up the language from the maids

Q.5 Students use their fingers to calculate numbers. Which maxim is used here?

Question ID : 1626531380

- Ans
- ☐ 1. From simple to complex
 - ☒ 2. From concrete to abstract
 - ☐ 3. From particular to general
 - ☐ 4. From known to unknown

Q.6 Which part of the Constitution contains provisions related to language?

Question ID : 1626531369

- Ans
- ☐ 1. 19
 - ☐ 2. 20
 - ☒ 3. 17
 - ☐ 4. 18

Q.7 Which one is NOT an appropriate option from the following?

Question ID : 1626531365

- Ans
- ☐ 1. Write a movie review : Critical thinking
 - ☐ 2. Write a blog to express views : Creative thinking
 - ☒ 3. Prepare poster : Problem Solving
 - ☐ 4. Prepare presentation : Interpersonal relationships

Q.8 How many languages are mentioned in the 8th schedule now?

Question ID : 1626531376

- Ans
- ☐ 1. 20
 - ☐ 2. 18
 - ☒ 3. 22
 - ☐ 4. 14

Q.9 भाषा शिक्षण क्या है?

Question ID : 1626531374

- Ans
- ☒ 1. अंतर्निहित शिक्षण
 - ☒ 2. प्राकृतिक शिक्षा
 - ☒ 3. अनौपचारिक शिक्षा
 - ☒ 4. औपचारिक शिक्षा

Q.10 शिक्षकों को शिक्षण में मल्टीमीडिया का उपयोग क्यों करना चाहिए?

Question ID : 1626531364

- Ans
- ☒ 1. विभिन्न तकनीक का प्रभावी ढंग से उपयोग
 - ☒ 2. ज्ञान, खोज और अनुभव की खोज
 - ☒ 3. नोट्स बनाने के प्रयासों को कम करना
 - ☒ 4. अधिकतम अनुभवों का मिश्रण

Q.11 जब छात्र व्यवस्थित ढंग से सोच और उद्देश्य तर्क की आदत विकसित करते हैं तो इसे क्या कहा जाता है?

Question ID : 1626531381

- Ans
- ☒ 1. रुचि विकसित करना
 - ☒ 2. विकासशील दृष्टिकोण
 - ☒ 3. कौशल विकसित करना
 - ☒ 4. विकास और समझना

Q.12 What are the steps of ADDIE model?

Question ID : 1626531367

- Ans
- ☒ 1. Analysis, Design, Development, Implementation, Evaluation
 - ☒ 2. Application, Design, Development, Implementation, Evaluation
 - ☒ 3. Application, Development, Design, Implementation, Evaluation
 - ☒ 4. Analysis, Development, Design, Implementation, Evaluation

Q.13 What is a disadvantage of computer-assisted language learning?

Question ID : 1626531371

- Ans
- ☒ 1. Used for remedial teaching
 - ☒ 2. Less interaction between student and teacher
 - ☒ 3. It can be expensive
 - ☒ 4. Less motivation factor

Q.14 माता-पिता को समय सारणी भेजने के लिए निम्नलिखित में से कौन सा उचित विकल्प है?

Question ID : 1626531362

- Ans
- ☒ 1. ब्लॉग
 - ☒ 2. चैटिंग
 - ☒ 3. ईमेल
 - ☒ 4. फोरम

Q.15 What is the use of drill and practice software?

Question ID : 1626531366

- Ans
- ☒ 1. To practice facts and remember procedures

- ☒ 2. To make clear understanding of concept
- ☒ 3. To repeat content till understood
- ☒ 4. To remember content

Q.16 यदि कोई छात्र नई भाषा सीखने में समस्या का सामना कर रहा है, तो आप उसकी मदद कैसे करेंगे?

Question ID : 1626531370

Ans ☒ 1.

नई भाषा सीखते समय एल.एस.आर.डब्ल्यू. कौशल का अभ्यास करना

☒ 2. बढ़ती शब्दावली

☒ 3.

उसे अपनी ज्ञात भाषा से अनुवाद तकनीक का उपयोग करने के लिए कहना

☒ 4.

मातृभाषा और नई भाषा के व्याकरण की तुलना करना

Q.17 What is the reference of following objective?

Question ID : 1626531379

'Students begin to perceive the structure of mathematics as a discipline'.

Ans ☒ 1. NPE (1986)

☒ 2. NCF (2005)

☒ 3. NCF (2009)

☒ 4. NCF (2000)

Q.18 आम तौर पर, द्वितीय भाषा अधिग्रहण कैसे शुरू होता है?

Question ID : 1626531377

Ans ☒ 1. आत्म-विश्लेषण

☒ 2. अभिव्यक्ति

☒ 3. समझ

☒ 4. सही/गलत का विश्लेषण

Q.19 According to the three language formula, what should be the first language?

Question ID : 1626531375

Ans ☒ 1. English

☒ 2. Hindi

☒ 3. Any modern language

☒ 4. Regional language/Mother tongue

Q.20 What makes discussion more effective?

Question ID : 1626531372

Ans ☒ 1. Debating attitude

☒ 2.

Discovering unknown factors and tolerance of views

☒ 3. Interaction among the participants

☒ 4. Control of a teacher

Section : Subject Related

Q.1 What skills are developed by a mathematics education?

Question ID : 1626531383

Ans ☒ 1. Problem solving, creative thinking

- ☒ 2. Decision making, creative thinking
☒ 3. Problem solving, inter personal relationship
☒ 4. Decision making, problem solving

Q.2 According to Selman, self-reflective perspective taking sets in the age group of:

Question ID : 1626531399

- Ans
- ☒ 1. 14 – adults
☒ 2. 7 – 12 years
☒ 3. 10 – 15 years
☒ 4. 3 – 9 years

Q.3 Which of the following statements is NOT TRUE in the context of the main objectives of teaching environmental education at the primary level?

Question ID : 1626531388

- Ans
- ☒ 1.
 To understand interaction between the various elements and components of the environment.
☒ 2.
 To build understanding, awareness and sensitivity towards causes and efforts of the class that.
☒ 3.
 To know and understand the interaction between mammals, between humans and their environment.
☒ 4.
 To know and understand true aspects of the life education.

Q.4 निम्नलिखित में से कौन सा अस्वीकृत बच्चों की मदद करने का एक प्रभावी तरीका नहीं है?

Question ID : 1626531401

- Ans
- ☒ 1. घुड़कना (रीप्रीमंडिंग)
☒ 2. मॉडलिंग
☒ 3. कोचिंग
☒ 4.

सकारात्मक सामाजिक व्यवहार को मजबूत करना

Q.5 All of the organic and inorganic components surrounding us, as well as the events, conditions and processes of their interactions, are collectively known as _____.

Question ID : 1626531384

- Ans
- ☒ 1. biological components
☒ 2. the ecosystem
☒ 3. material interchange
☒ 4. the environment

Q.6 पर्यावरण अध्ययन पढ़ाने का मुख्य उद्देश्य छात्रों के लिए _____ है।

Question ID : 1626531387

- Ans
- ☒ 1.
 सामान्य लेकिन सरल और आसानी से देखने योग्य सामाजिक-आर्थिक परिस्थितियों और समस्याओं को समझना, उनका विश्लेषण करना, और उनके संभावित समाधानों की तलाश करना
☒ 2.
 गैर-जीवित चीजों की कुछ सामान्य विशेषताओं का निरीक्षण और जांच करना
☒ 3.
 पृथ्वी और आकाश में सरल घटनाओं को देखते हुए, उनके कारणों और चित्रों को चित्रित करना
☒ 4.
 अपने सामाजिक-नागरिक पर्यावरण के महत्वपूर्ण पहलुओं की खोज करना, और इसके विभिन्न पहलुओं को समझना

Q.7 पर्यावरण विज्ञान को पढ़ाने के लिए उपयोग करने के लिए सबसे अच्छी रणनीतियों में से एक _____ सक्रिय शिक्षा का एक प्रकार है, जहां प्रश्न उद्देश्य के लिए गतिविधियाँ और चर्चा का मार्गदर्शन करते हैं।

Question ID : 1626531386

- Ans
- ☒ 1. समूह की गतिशीलता
☒ 2. परियोजना विधि

✓ 3. पूछताछ आधारित शिक्षा

✗ 4. ब्रेन बेस्ड लर्निंग

Q.8 _____ छात्र को पता चलता है कि समाज कैसे काम करते हैं, और वे किस तरह भाग ले सकते हैं और महत्वपूर्ण, जानकार और जिम्मेदार नागरिकों के रूप में कार्य कर सकते हैं।

Question ID : 1626531389

Ans

✗ 1. नागरिक शास्र

✗ 2. नागरिकता शिक्षा

✓ 3. सामाजिक विज्ञान

✗ 4. सामाजिक कार्य

Q.9 Outdoor games are the best solution for:

Question ID : 1626531397

Ans

✗ 1.

developing psychomotor skills among the students

✗ 2. making students healthy

✗ 3.

keeping students away from mobiles and technology

✓ 4.

teaching students how to accept losing situations and improving intrapersonal relationships

Q.10 Which of the following is the best example for creativity?

Question ID : 1626531393

Ans

✓ 1.

Trying to create your own musical instrument by using seven ceramic bowls with water such as a Jal Tarang

✗ 2. Performing a new role in a skit

✗ 3. Playing a new tune on a guitar

✗ 4. Listening to new songs

Q.11 In the peer acceptance aspect, children who receive equal number of positive and negative votes are called:

Question ID : 1626531400

Ans

✓ 1. controversial children

✗ 2. neglected children

✗ 3. rejected children

✗ 4. popular children

Q.12 किसके कारण शुरुआती किशोरावस्था अनुपात से बाहर दिखाई देते हैं?

Question ID : 1626531398

Ans

✗ 1. शीर्ष-पुच्छ विकास (सेफेलो-कौडल डेवलपमेंट)

✗ 2. शीर्ष विकास

✓ 3.

विपरीत शीर्ष-पुच्छ विकास (रिवर्सड सेफेलो-कौडल डेवलपमेंट)

✗ 4. समीपवर्ती विकास

Q.13 What is regional art and craft?

Question ID : 1626531392

Ans

✓ 1.

Art originating among the people of region, reflecting their traditional culture.

✗ 2. Art and craft related to a particular region.

✗ 3. The art we can see at various places.

X 4.

Modern art influenced with traditional approach.

Q.14 एक सामाजिक अध्ययन शिक्षक में आवश्यक गुण क्या हैं?

Question ID : 1626531391

Ans X 1.

अकादमिक योग्यता में अच्छी तरह से सुसज्जित, ईमानदारी का एक व्यक्ति

X 2.

सामाजिक अध्ययन, व्यापक रूप से यात्रा, एक अच्छा नागरिक शिक्षण की पद्धति में एक विशेषज्ञ

✓ 3.

अकादमिक योग्यता, मानव गुणों और सामाजिक मुद्दों की गहरी समझ के साथ सुसज्जित

X 4.

मानव गुणों, एक वैज्ञानिक और एक कलाकार में अच्छी तरह सुसज्जित

Q.15 How can you observe a student for gardening activities?

Question ID : 1626531395

Ans ✓ 1.

Right from the beginning till the end of the activity

X 2.

While preparing for gardening activities

X 3.

During his activity time

X 4.

After completion of the gardening task

Q.16 विभिन्न आयु समूहों के लिए सोशल साइंस पाठ्यक्रम में शामिल विषयों जैसे - भारत के त्यौहार, विभिन्न प्रकार के परिवार, हमारे पहनने के कपड़े, हमारे भोजन, हमारा देश, विकसित होता है।

Question ID : 1626531390

Ans ✓ 1.

छात्रों की सामाजिक समझ

X 2.

भविष्य के नागरिकों के रूप में जिम्मेदारी

X 3.

सांस्कृतिक पृष्ठभूमि

X 4.

स्वयं की समझ

Q.17 पर्यावरण शिक्षा अनुशासन में कई और बहुस्तरीय क्षेत्र हैं। यह मुख्य रूप से किन मुद्दों पर केंद्रित है?

Question ID : 1626531385

Ans ✓ 1.

संसाधनों का टिकाऊ उपयोग, जीवित प्राणियों के बीच अंतर-संबंध और पर्यावरण, पर्यावरण साक्षर नागरिक

X 2.

पारिस्थितिक तंत्र, जैव विविधता समृद्धि और संभावित खतरे

X 3.

प्राकृतिक और प्रेरित आपदाओं और प्रदूषण के कारण कारण और परिणाम

X 4.

आबादी, स्वास्थ्य, स्वच्छता, संसाधन प्रबंधन की समस्याएं

Q.18 निम्नलिखित में से कौन सी विधि सिद्धांत करके सीखने पर आधारित है?

Question ID : 1626531382

Ans X 1.

व्याख्यान सह चर्चा विधि

✓ 2.

समस्या समाधान विधि

X 3.

आगमनात्मक और निगमनात्मक विधि

X 4.

विश्लेषणात्मक संश्लेषण विधि

Q.19 कला शिक्षा के संबंध में छात्रों के बीच रुचि विकसित करने के लिए क्या किया जा सकता है?

Question ID : 1626531394

Ans ✓ 1.

स्वयं को व्यक्त करना पसंद करते हुए किसी भी कला रूप को चुनने और निष्पादित करने में उनकी सहायता करना

✗ 2. कला विषय को अनिवार्य बनाना

✗ 3.

कला विषय लेने वाले छात्रों को अतिरिक्त अंक देना

✗ 4.

कला के माध्यम से खुद को व्यक्त करने के महत्व के बारे में छात्रों को जागरूक करना

Q.20 योग छात्रों की मदद कैसे करता है?

Question ID : 1626531396

Ans

✓ 1. स्वस्थ और मानसिक रूप से मजबूत

✗ 2. ध्यान करते समय

✗ 3. शारीरिक फिटनेस में वृद्धि

✗ 4. योग गतिविधियों में सक्रिय होना

Section : Subject Related

Q.1 स्कूल में माता-पिता के योगदान में बाधाओं को इस रूप में दिया गया है, केवल इस एक को छोड़कर:

Question ID : 1626531421

Ans

✓ 1. नीतियों में कमी

✗ 2. माता-पिता की शिक्षा और रवैया

✗ 3. संवादहीनता

✗ 4.

स्कूल के विकास में वास्तविक भूमिका के बारे में कम जागरूकता

Q.2 आत्म-समझ और आत्म-सम्मान वृद्धि में बच्चों के लिए निम्नलिखित गतिविधियों में से कौन शामिल है?

Question ID : 1626531413

Ans

✗ 1. भावनाओं की अभिव्यक्ति

✓ 2. नोट्स से अभ्यास

✗ 3. सकारात्मक प्रतिक्रिया गतिविधियां

✗ 4. ट्रस्ट गतिविधियां

Q.3 प्राथमिक विद्यालय के कार्यों के प्रबंधन के बारे में निम्नलिखित में से कौन सा वाक्य सही नहीं है?

Question ID : 1626531418

Ans

✗ 1. स्कूल की वार्षिक रिपोर्ट तैयार करना

✓ 2.

शिक्षकों के लिए प्रशिक्षण और मार्गदर्शन सत्र आयोजित करना

✗ 3.

नए शिक्षकों, विद्यार्थियों और माता-पिता को शामिल करना

✗ 4.

स्कूल में रुचि रखने वाले सभी लोगों से स्कूल कार्यक्रमों और गतिविधियों के बारे में नियमित संवाद

Q.4 What is the minimum requirement from school to deal with health related problems?

Question ID : 1626531407

Ans

✗ 1.

Availability of a doctor in the school premises

✗ 2. Funds available for health issues

✓ 3.

Teachers, school nurses, parents and children have basic knowledge about managing respiratory infections, asthma, and diarrhoea

✗ 4.

Good structure of a school building and sanitation facilities

Q.5 Which of the following can be the best place for a school?

Question ID : 1626531404

- Ans
- ☒ 1. Away from pollution
 - ☒ 2. Out of the city
 - ☒ 3. In a natural environment
 - ☒ 4. In a locality safe for students

Q.6 मौखिक हमलों का लगातार लक्ष्य किस रूप में सामने आता है?

Question ID : 1626531403

- Ans
- ☒ 1. सहकर्मियों की स्वीकृति
 - ☒ 2. साथियों की मिलनसारिता
 - ☒ 3. साथियों का दबाव
 - ☒ 4. साथियों का उत्पीड़न

Q.7 Who is responsible for health of the child in school?

Question ID : 1626531405

- Ans
- ☒ 1. Doctor in school
 - ☒ 2. Headmaster
 - ☒ 3. Class teacher
 - ☒ 4. Parents

Q.8 Who recommended the inclusion of skills-based health education, life skills, child-friendly/health-promoting schools?

Question ID : 1626531408

- Ans
- ☒ 1. NPE
 - ☒ 2. NCF
 - ☒ 3. NCF (2000)
 - ☒ 4. WHO

Q.9 _____, as mandated by the Right to Education Act (RTE) 2009, have a critical role to play in ensuring accountability in the education system to empower the parents to monitor school functioning.

Question ID : 1626531415

- Ans
- ☒ 1. School Management Committees
 - ☒ 2. School Monitoring Council
 - ☒ 3. School Meeting Centre
 - ☒ 4. School Management Council

Q.10 प्रभावी स्कूल प्रबंधन के सबसे प्रासंगिक संकेतक क्या हैं?

Question ID : 1626531417

- Ans
- ☒ 1. व्यावसायिक क्षमता, संचार, टीम का काम, सामुदायिक भागीदारी
 - ☒ 2. दिए गये विकल्पों में से कोई नहीं
 - ☒ 3. व्यावसायिक क्षमता, नेतृत्व, छात्रों, प्रदर्शन, अभिभावक संतुष्टि
 - ☒ 4. व्यावसायिक क्षमता, व्यक्तिगत विकास, टीम का काम, पारस्परिक संबंध

Q.11 कार्य शिक्षा में अंतर्निहित गतिविधियां मुख्य रूप से निम्नलिखित विशेषताओं को विकसित करती हैं, सिवाय:

Question ID : 1626531411

- Ans
- ☒ 1. समस्या निवारण, महत्वपूर्ण सोच और निर्णय लेने के जैसे कौशल विकसित करना

✗ 2.

दुनिया की सांसारिक समस्याओं और वास्तविकता का परिचय देने के

✗ 3. व्यक्तित्व के विकास में मदद करने के

✓ 4.

उत्पादन में पेशेवर तैयारी और दक्षता को विकसित और बढ़ाने के

Q.12 _____ स्थानीय संसाधनों की उपलब्धता के आधार पर मानसिक स्तर और बच्चों के कौशल के अनुसार सेवा, भोजन, कपड़े, सामाजिक सेवा और मनोरंजन से युक्त गतिविधियों को शामिल करता है।

Question ID : 1626531410

Ans

✓ 1. कार्य शिक्षा

✗ 2. सामुदायिक कार्य

✗ 3. सामाजिक कार्य

✗ 4. कार्य अनुभव

Q.13 Popular pro-social children:

Question ID : 1626531402

Ans

✓ 1. show academic and social competence

✗ 2. are authoritative

✗ 3. are dominating

✗ 4. are athletic and physically well-built

Q.14 स्कूल प्रबंधन प्रक्रिया में प्राथमिक स्कूल शिक्षकों की प्रत्यक्ष भागीदारी को निम्नलिखित तरीकों से अपेक्षित है, केवल इसे छोड़कर:

Question ID : 1626531419

Ans

✗ 1. राजस्व प्रबंधन

✗ 2. संचार और सहयोग

✓ 3. नीति निर्माण

✗ 4. कक्षा प्रबंधन

Q.15 _____ is a necessity in enhancing work performance and motivation of teachers in the field.

Question ID : 1626531414

Ans

✗ 1. Increments based on performance

✗ 2. Reduction in workload

✓ 3. In-service teacher training

✗ 4. Summer/Winter school

Q.16 How should children be protected from ultraviolet radiation?

Question ID : 1626531409

Ans

✗ 1. Arranging nature visit camps

✓ 2. Planting shade trees around school grounds

✗ 3. Allowing ventilation in the class

✗ 4. Taking students on ground

Q.17 Nutrition and food safety; water quality; air quality; sanitation facilities; transportation; waste; facilities design, construction, renovation and maintenance; grounds; hazardous materials storage; pesticide use; and purchasing comes under:

Question ID : 1626531406

Ans

✗ 1. Procedural policies of school

✗ 2. Financial strategies of school

✗ 3. Aims of objectives of school

✓ 4. Specific intervention strategies of school

Q.18 _____ को किसी भी छात्र-केंद्रित स्कूल-सामुदायिक संपर्क के रूप में परिभाषित किया जाता है जो सीधे या परोक्ष रूप से छात्रों की शारीरिक, सामाजिक, भावनात्मक और बौद्धिक आवश्यकताओं का समर्थन करता है।

Question ID : 1626531416

Ans

- ☒ 1. सामुदायिक संरक्षण
- ☒ 2. सामुदायिक स्वयंसेवक
- ☒ 3. सार्वजनिक स्वास्थ्य संघ
- ☒ 4. समुदाय की भागीदारी

Q.19 छात्रों को दी गई परियोजनाएं निम्नलिखित हैं:

Question ID : 1626531412

- a. एक परिवार के सदस्य के रूप में घर के काम का एक सप्ताह का लॉग बुक तैयार करना
- b. अपशिष्ट वस्तुओं का उपयोग करके कोई भी एक परियोजना तैयार करना

जिस विषय के लिए छात्रों को इस परियोजना को सौंपा गया है वह विषय है:

Ans

- ☒ 1. कला और कारीगर
- ☒ 2. मूल्य (नैतिक) शिक्षा
- ☒ 3. कार्य शिक्षा
- ☒ 4. अनौपचारिक शिक्षा

Q.20 न्यूजलेटर, वेब साइट्स और प्रेस विज्ञप्तियां _____ सुनिश्चित करने के लिए दो तरह की प्रणाली विकसित करने के उपाय हैं।

Question ID : 1626531420

Ans

- ☒ 1. स्कूल की प्रगति
- ☒ 2. स्कूल के परिणाम
- ☒ 3. माता-पिता की प्रतिक्रिया
- ☒ 4. स्कूल प्रचार