

**8 GGG6
DFH**

**Previous Year Paper
(Assistant Teacher Primary)**

**2. March 2022 Shift 2
(English)**

Adda247

Test Prime

ALL EXAMS, ONE SUBSCRIPTION



80,000+
Mock Tests



**Personalised
Report Card**



**Unlimited
Re-Attempt**



600+
Exam Covered



20,000+ Previous
Year Papers



500%
Refund



ATTEMPT FREE MOCK NOW

Test Date	25/03/2022
Test Time	12:30 PM - 2:30 PM
Subject	ASSISTANT TEACHER PRIMARY

Section : Mental Ability

Q.1 In the following question, select the odd group of numbers from the given alternatives.

- Ans ☐ A. (47, 95, 191)
☐ B. (31, 63, 127)
☐ C. (54, 109, 219)
☒ D. (67, 135, 272)

Question ID : 1034357798

Q.2 In the following question below are given some statements followed by some conclusions based on those statements. Taking the given statements to be true even if they seem to be at variance from commonly known facts. Read all the conclusions and then decide which of the given conclusion logically follows the given statements.

Statements:

- I. All P are C.
 II. Some C are D.
 III. All D are N.

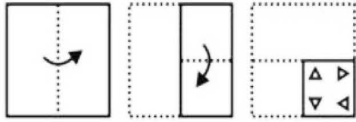
Conclusions:

- I. Some N are C.
 II. Some P are N.
 III. Some D are P.

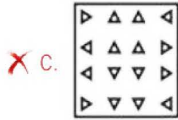
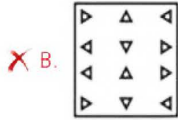
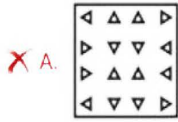
- Ans ☐ A. Only conclusion III follows
☐ B. All conclusion follows
☐ C. Only conclusion II follows
☒ D. Only conclusion I follows

Question ID : 1034357796

Q.3 A piece of paper is folded and punched as shown below in the question figures. From the given answer figures, indicate how it will appear when opened?



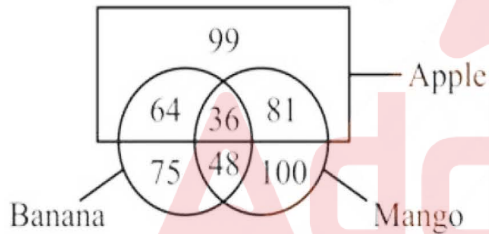
Ans



Question ID : 1034357805

Q.4 Based on the given venn diagram, which of the following statement(s) is/are correct?

- I. The number of apples which are mango is 81.
II. The number of Bananas which are apple is 100.



Ans

☒ A. Only II

☒ B. Only I

☒ C. Both I and II

☒ D. Neither I nor II

Question ID : 1034357800

Q.5 In the following question, four letter pairs are given. The letters on left side of (-) is related to the letters on the right side of (-) with some Logic/Rule/Relation. Three are similar on basis of same Logic/Rule/Relation. Select the odd one out from the given alternatives.

Ans

☒ A. JZ - KY

☒ B. CF - BE

☒ C. XQ - WP

☒ D. NP - MO

Question ID : 1034357788

Q.6 In the following question below are given some statements followed by some conclusions based on those statements. Taking the given statements to be true even if they seem to be at variance from commonly known facts. Read all the conclusions and then decide which of the given conclusion logically follows the given statements.

Statements:

I. Some R are Z.

II. Some Z are P.

Conclusions:

I. Some P are R.

II. Some R are not P.

Ans ☒ A. Neither conclusions follow


☒ B. Only conclusion II follows

☒ C. Both conclusions I and II follow

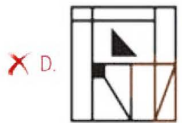
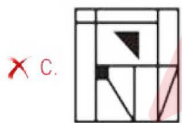
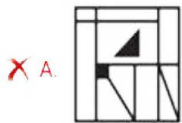
☒ D. Only conclusion I follows

Question ID : 1034357795

Q.7 If a mirror is placed on the line AB, then which of the answer figures is the right image of the given figure?



Ans



Question ID : 1034357804

Q.8 Six persons A, B, C, D, E and F have their off on six different days of the same week from Monday to Saturday (not necessarily in the same order). No two persons has off on the same day. Two persons have off between D and F. Two persons have off between A and E. C has off just after A has off. D has off on Friday. Which of the following statement is correct?

- I. A has off on Wednesday.
II. One person has off between A and B.

Ans ☒ A. Only II
☒ B. Both I and II
☒ C. Only I
☒ D. Neither I nor II

Question ID : 1034357793

Q.9 In a certain code language, 'VIOLENT' is written as 'ZMSHIRX'. What is the code for 'CORDIAL' in that code language?

Ans ☒ A. GSUZMFP
☒ B. GSVZNEP
☒ C. GSVZMEP
☒ D. GSUZNEP

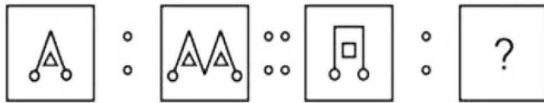
Question ID : 1034357791

Q.10 Six boys B1, B2, B3, B4, B5 and B6 have six different phones P1, P2, P3, P4, P5 and P6 (not necessarily in the same order). B3 has P6. B1 does not have P3 or P4. B4 does not have P2, P3 or P5. B6 has P1. B5 does not have P3 or P5. Which phone does B2 have?

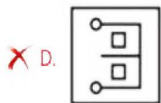
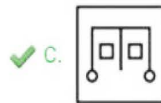
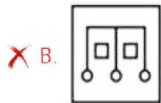
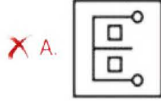
Ans ☒ A. P2
☒ B. P4
☒ C. P3
☒ D. P5

Question ID : 1034357792

Q.11 Two figures given on the left side of (::) are related with some logic/rule/relation. Select the missing figure on the right of (::) from the given alternatives based on the same logic/rule/relation.

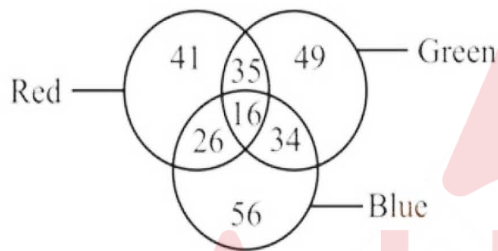


Ans



Question ID : 1034357803

Q.12 How many red are neither blue nor green?



Ans ☒ A. 16

☒ B. 41

☒ C. 35

☒ D. 26

Question ID : 1034357799

Q.13 A series is given with one term missing. Select the correct alternative from the given ones that will complete the series.
AL, YP, WT, UX, SB, ?

Ans ☒ A. QF

☒ B. PF

☒ C. RF

☒ D. QE

Question ID : 1034357786

Q.14 A series is given with one term wrong. Select that wrong term from the given alternatives.
259, 292, 327, 366, 403, 444

Ans ☒ A. 444

☒ B. 366

☒ C. 327

☒ D. 403

Question ID : 1034357797

Q.15 In the following question, select the related letter pair from the given alternatives.
MAV : PEA :: ?

Ans ☒ A. PFE : SJJ

☒ B. NQS : QVX

☒ C. ADX : DHB

☒ D. RCT : UFY

Question ID : 1034357790

Q.16 In the following question, select the related words from the given alternatives.
School : Teacher :: Hospital : ?

Ans ☒ A. Scalpel

☒ B. Needle

☒ C. Doctor

☒ D. Lawyer

Question ID : 1034357789

Q.17 Eight persons A, B, C, D, E, F, G and H sit around a circular table facing towards the centre (not necessarily in the same order). Three persons sit between G and H. Two persons sit between B and G. Two persons sit between C and E. A sits to the immediate left of D. H is not the neighbour of D. E sits fourth to the right of B. Which of the following statement is correct?
I. G sits to the immediate left of F.
II. Two persons sit between D and F.

Ans ☒ A. Only I

☒ B. Neither I nor II

☒ C. Only II

☒ D. Both I and II

Question ID : 1034357794

Q.18 P is facing towards the south. He rotates 135 degree in the anticlockwise direction. Then, he rotates 120 degree in the clockwise direction. In which direction is he facing now?

Ans ☒ A. North-west

☒ B. North-east

☒ C. South-west

☒ D. South-east

Question ID : 1034357801

Q.19 Arrange the given words in the sequence in which they occur in the dictionary.

1. Vaccillating
2. Vacationing
3. Vaccination
4. Vacuumising
5. Vacillatory

Ans ☒ A. 21354

☒ B. 23154

☒ C. 23145

☒ D. 21345

Question ID : 1034357787

Q.20 Tarun walks 10 metre to the north from point A and reaches point B. He turns to the left and walks 15 metre and reaches point C. He again turns to the left and walks 20 metre and reaches point D. He turns to the right and walks 15 metre and reaches point E. He again turns to the right and walks 25 metre and reaches point F. Which of the following statement is correct?

- I. Point B is to the south-east of point F.
- II. Point F is to the north-west of point A.

Ans ☒ A. Both I and II

☒ B. Neither I nor II

☒ C. Only I

☒ D. Only II

Question ID : 1034357802

Section : General Awareness

Q.1 Magnus Carlsen is associated with which sports?

Ans ☒ A. Chess

☒ B. Volleyball

☒ C. Badminton

☒ D. Cricket

Question ID : 1034357825

Q.2 On the basis of number of cotyledons present in the seed, the angiosperms are divided into _____ groups.

Ans ☒ A. 5

☒ B. 3

☒ C. 4

☒ D. 2

Question ID : 1034357811

Q.3 'Gochi' festival is celebrated in which state of India?

Ans ☒ A. Himachal Pradesh

☐ B. Punjab

☐ C. Rajasthan

☐ D. Uttar Pradesh

Question ID : 1034357807

Q.4 Which of the following statement is correct?

I. Demand curve is a relation between the quantity of the good chosen by a consumer and the price of the good.

II. Law of demand states that other things being equal, there is a positive relation between demand for a commodity and its price.

Ans ☐ A. Both I and II

☐ B. Only II

☒ C. Only I

☐ D. Neither I nor II

Question ID : 1034357809

Q.5 Which article of Indian constitution is related to the prohibition of employment of children in factories etc.?

Ans ☐ A. Article 21

☐ B. Article 17

☒ C. Article 24

☐ D. Article 20

Question ID : 1034357823

Q.6 Which of the following statement is correct?

I. Prarthana Samaj was established in 1867.

II. Aligarh Muslim University was founded by Moulana Abul Kalam Azad.

Ans ☐ A. Both I and II

☐ B. Neither I nor II

☒ C. Only I

☐ D. Only II

Question ID : 1034357818

Q.7 Which of the following is also known as 'Golden Fibre'?

Ans ☒ A. Jute

☐ B. Millets

☐ C. Maize

☐ D. Cotton

Question ID : 1034357813

Q.8 Who among the following person has NOT been awarded Nobel prize 2020 for physics?

Ans ☒ A. Jennifer A. Doudna

☐ B. Roger Penrose

☐ C. Reinhard Genzel

☐ D. Andrea M. Ghez

Question ID : 1034357821

Q.9 Rajaraja I was the ruler of _____ dynasty.

Ans ☐ A. Chandella

☐ B. Pallava

☐ C. Chalukyas

☒ D. Chola

Question ID : 1034357817

Q.10 Which of the following statement is correct?

I. The Labrador ocean current is a cold current.

II. The areas where a warm and cold current meet experience foggy weather.

Ans ☐ A. Only I

☒ B. Both I and II

☐ C. Neither I nor II

☐ D. Only II

Question ID : 1034357815

Q.11 The highest peak of eastern ghats is _____.

Ans ☐ A. Doda Betta

☐ B. Kanchenjunga

☒ C. Mahendragiri

☐ D. Anai Mudi

Question ID : 1034357814

Q.12 Number of players in each team of Volleyball is _____.

Ans ☐ A. 7

☒ B. 6

☐ C. 8

☐ D. 5

Question ID : 1034357824

Q.13 The book "Meghdoot" was written by _____.

- Ans ☒ A. Kalhana
☒ B. Kalidasa
☒ C. Surdas
☒ D. Panini

Question ID : 1034357820

Q.14 The SI unit of electric potential difference is _____.

- Ans ☒ A. Ampere
☒ B. Coulomb
☒ C. Ohm
☒ D. Volt

Question ID : 1034357810

Q.15 The Bara Imambara is situated in which state of India?

- Ans ☒ A. Rajasthan
☒ B. Tamil Nadu
☒ C. Maharashtra
☒ D. Uttar Pradesh

Question ID : 1034357806

Q.16 'INDRA NAVY' is a naval exercise between _____ and _____.

- Ans ☒ A. India, Bangladesh
☒ B. India, France
☒ C. India, Australia
☒ D. India, Russia

Question ID : 1034357819

Q.17 The first session of the constituent assembly was held on _____.

- Ans ☒ A. 26 January 1946
☒ B. 9 December 1946
☒ C. 26 November 1946
☒ D. 9 December 1945

Question ID : 1034357822

Q.18 Market stabilization scheme was introduced by RBI in _____.

- Ans ☒ A. 2004
☒ B. 2006
☒ C. 2005
☒ D. 2003

Question ID : 1034357808

Q.19 In which year Vasco Da Gama came to India?

- Ans ☒ A. 1498
- ☐ B. 1450
- ☐ C. 1445
- ☐ D. 1470

Question ID : 1034357816

Q.20 Which of the following statement is NOT correct?

- Ans ☐ A. The SI unit of force is kg m/s^2 .
- ☐ B. In an isolate system, the total momentum remains conserved.
- ☒ C. Action and Reaction forces always act on the same object.
- ☐ D. The mass of an object is a measure of its inertia.

Question ID : 1034357812

Section : Arithmetic Ability

Q.1 The table given below shows the number of cars sold by three different companies.

Cars	Company		
	P	Q	R
C1	40	25	180
C2	20	15	20
C3	80	60	45
C4	105	120	70
C5	35	160	80

Which of the following statement is correct?

- I. The number of car C1 sold by P is 160 percent of number of car C1 sold by Q.
- II. The average number of cars C3, C4 and C5 sold by R is 65.
- III. The sum of number of all cars sold by Q is 380.

- Ans ☐ A. Both I and III
- ☒ B. I, II and III
- ☐ C. Both II and III
- ☐ D. Both I and II

Question ID : 1034357843

Q.2 Average of 13 numbers is 22. If each number is multiplied by 3, then what will be the new average?

- Ans ☐ A. 48
- ☒ B. 66
- ☐ C. 68
- ☐ D. 44

Question ID : 1034357831

Q.3 M is 25 percent more than N. N is how much percentage less than M?

Ans ☒ A. 20 percent

☐ B. 25 percent

☐ C. 25.5 percent

☐ D. 15 percent

Question ID : 1034357832

Q.4 If radius of a sphere is increased by 30 percent, then what will be the percentage increase in its volume?

Ans ☐ A. 120 percent

☐ B. 90 percent

☒ C. 119.7 percent

☐ D. 125.5 percent

Question ID : 1034357833

Q.5 The speed of a bike is 39.6 km/hr. How much time will the bike take to cover a distance of 330 meters?

Ans ☐ A. 20 seconds

☐ B. 24 seconds

☐ C. 36 seconds

☒ D. 30 seconds

Question ID : 1034357838

Q.6 What is the simplified value of $\frac{6}{5+4\sqrt{3}}$?

Ans

☒ A. $\frac{24\sqrt{3}-30}{23}$

☐ B. $\frac{13\sqrt{3}-15}{27}$

☐ C. $\frac{24\sqrt{5}-25}{25}$

☐ D. $\frac{15\sqrt{3}-24}{23}$

Question ID : 1034357828

Q.7 If $a = \sqrt{6 - \sqrt{11}}$ and $b = \sqrt{6 + \sqrt{11}}$, then what is the value of $(b - a)$?

- Ans
- ☐ A. $\sqrt{6}$
 - ☒ B. $\sqrt{2}$
 - ☐ C. $\sqrt{22}$
 - ☐ D. $\sqrt{3}$

Question ID : 1034357829

Q.8 Amar, Ritesh and Karan start a partnership. They invested Rs. 10000, Rs. 24000 and Rs. 16000 respectively. Amar, Ritesh and Karan stay in partnership for 2 months, 6 months and 8 months respectively. If total profit is Rs. 146000, then what is the combined share of Amar and Karan in the profit?

- Ans
- ☐ A. Rs. 64000
 - ☒ B. Rs. 74000
 - ☐ C. Rs. 84000
 - ☐ D. Rs. 72000

Question ID : 1034357836

Q.9 P and Q together can complete a work in 10 days. Q and R together can complete the same work in 15 days. If P, Q and R all work together, then the same work gets completed in 7.5 days. How many days will P and R together take to complete the same work?

- Ans
- ☐ A. 15 days
 - ☐ B. 5 days
 - ☐ C. 7 days
 - ☒ D. 10 days

Question ID : 1034357840

Q.10 Diagonal of a square is $26\sqrt{2}$ cm. What is the area of this square?

- Ans
- ☐ A. 169 cm^2
 - ☐ B. 338 cm^2
 - ☒ C. 676 cm^2
 - ☐ D. 576 cm^2

Question ID : 1034357841

Q.11 If a number 5872Y is exactly divisible by 9, then what is the value of Y?

- Ans
- ☒ A. 5
 - ☐ B. 8
 - ☐ C. 4
 - ☐ D. 9

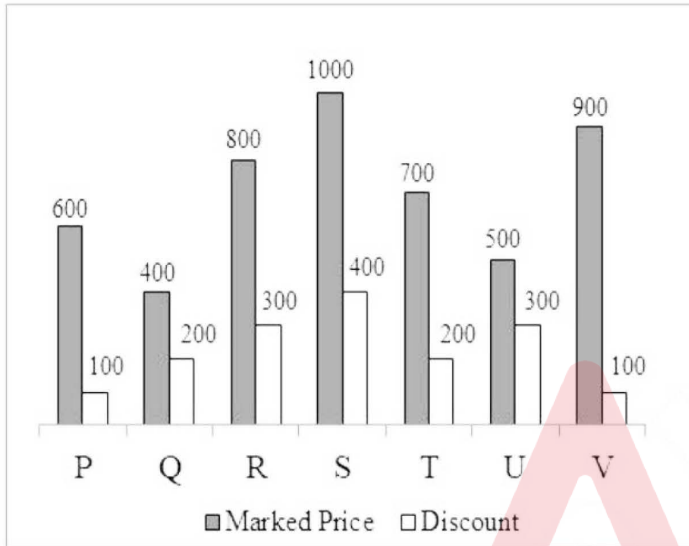
Question ID : 1034357827

Q.12 Simple interest on a sum of Rs. 2400 for 2 years is Rs. 288. What is the annual rate of interest?

- Ans ☒ A. 5 percent
☒ B. 6 percent
☒ C. 4 percent
☒ D. 8 percent

Question ID : 1034357837

Q.13 The bar graph given below shows the marked price and discount of 7 articles.



Selling price = Marked price - Discount

J1 = The average selling price of articles P, Q, R and S.

J2 = The difference between total marked price and total selling price of all 7 articles.

What is the value of (J2 - J1)?

- Ans ☒ A. 1050
☒ B. 1250
☒ C. 1150
☒ D. 1390

Question ID : 1034357845

Q.14 What is value of $(24 \div 8 \times 5) - (8 \times 3 \div 2)$?

- Ans ☒ A. 1.5
☒ B. 9
☒ C. 3
☒ D. 2

Question ID : 1034357826

Q.15 Diameter of wheel of a cycle is 4.2 cm. A cyclist takes 90 minutes to reach a destination at the speed of 23.1 km/hr. How many revolutions will the wheel make during the journey?

- Ans ☐ A. 316400
☐ B. 226500
☐ C. 172500
☒ D. 262500

Question ID : 1034357839

Q.16 Vijay sells an article at a profit of 20 percent. If both the cost price and selling price are reduced by Rs. 20, then the profit becomes 30 percent. What is the initial cost price?

- Ans ☐ A. Rs. 100
☐ B. Rs. 80
☒ C. Rs. 60
☐ D. Rs. 75

Question ID : 1034357834

Q.17 In what ratio tea of Rs. 90 per kg should be mixed with tea of Rs. 120 per kg so that on selling the mixture at Rs. 132 per kg there is a profit of 20 percent?

- Ans ☐ A. 1 : 3
☐ B. 1 : 4
☒ C. 1 : 2
☐ D. 2 : 3

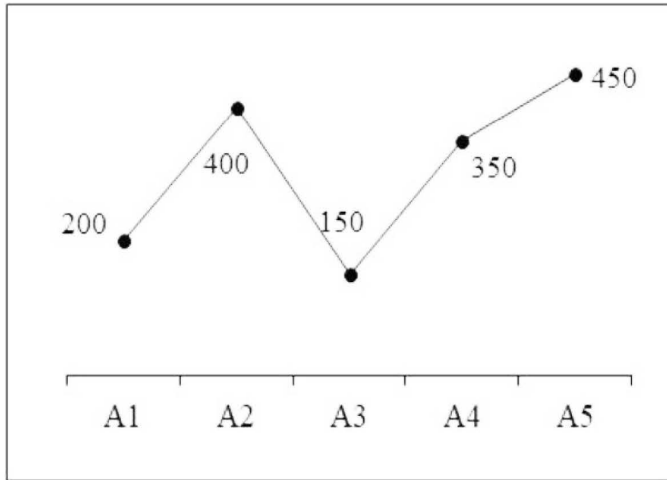
Question ID : 1034357835

Q.18 A solid cylinder is melted to form solid cones. Radius of cylinder is double of the radius of cone. Height of the cylinder is five time of the height of cone. How many cones will be formed?

- Ans ☐ A. 45
☒ B. 60
☐ C. 50
☐ D. 65

Question ID : 1034357842

Q.19 The line chart given below shows the cost price of 5 articles.



What is the average cost price of all the 5 articles?

- Ans
- ☒ A. 300
 - ☒ B. 320
 - ☒ C. 280
 - ☒ D. 310

Question ID : 1034357844

Q.20 What is the digit at the unit place $55^{78} \times 25^{35} \times 33^{72}$?

- Ans
- ☒ A. 0
 - ☒ B. 4
 - ☒ C. 5
 - ☒ D. 6

Question ID : 1034357830

Section : General English

Q.1 Choose the word that is opposite in meaning to the given word.
Aforethought

- Ans
- ☒ A. Impetuous
 - ☒ B. Protract
 - ☒ C. Provident
 - ☒ D. Foresighted

Question ID : 1034357855

Q.2 A sentence has been given with a blank to be filled with an appropriate word. Choose the correct alternative.
I felt _____ about not being able to help her.

- Ans ☒ A. tranquil
☒ B. calm
☒ C. awful
☒ D. sorrow

Question ID : 1034357850

Q.3 Rearrange the parts of the sentence in correct order.
P: Our friends may change over time.
Q: Songs are the most faithful of friends.
R: They are never cross, peevish, or unwilling to converse.
S: But our songs are always patiently waiting to talk to us.

- Ans ☒ A. QPSR
☒ B. PRQS
☒ C. QSPR
☒ D. QRSP

Question ID : 1034357853

Q.4 Select the most appropriate option to substitute the underlined segment in the given sentence. If no substitution is required, select 'No improvement' as your answer.
He is very much thankful.

- Ans ☒ A. very thankful
☒ B. No improvement
☒ C. very much thanks
☒ D. very many thanks

Question ID : 1034357848

Q.5 In the following question, out of the given four alternatives, select the alternative which best expresses the meaning of the Idiom/Phrase.
With bad grace

- Ans ☒ A. In a rude manner
☒ B. To threaten
☒ C. To pray for death
☒ D. To ignore

Question ID : 1034357859

Q.6 Choose the word that means the same as the given word.
Stubborn

- Ans ☒ A. Obtrusive
☒ B. Obese
☒ C. Observant
☒ D. Obstinate

Question ID : 1034357854

Q.7 Find the part of the given sentence that has an error in it. If there is no error, choose 'No error'.
Being a rainy day (1)/ Shiv decided to stay at (2)/ his friend's place (3)/.No error (4)

Ans ☒ A. 1

☐ B. 3

☐ C. 4

☐ D. 2

Question ID : 1034357846

Q.8 Select the most appropriate option to substitute the underlined segment in the given sentence. If no substitution is required, select 'No improvement' as your answer.

His dislike for her has being increased significantly lately.

Ans ☐ A. dislike with her has being increasing

☐ B. No improvement

☐ C. dislike for her has been increasing

☒ D. dislike to her has been increasing

Question ID : 1034357849

Q.9 Choose the word that can substitute the given sentence.
A person having the same name as another

Ans ☐ A. Pseudonym

☒ B. Namesake

☐ C. Sculptor

☐ D. Posthumous

Question ID : 1034357860

Q.10 In the given question, four words are given out of which one word is correctly spelt.
Choose the correctly spelt word.

Ans ☐ A. Turquois

☒ B. Turquoise

☐ C. Tarquise

☐ D. Turquoise

Question ID : 1034357857

Q.11 In the following question, out of the given four alternatives, select the alternative which best expresses the meaning of the Idiom/Phrase.
To grease somebody's palm

Ans ☐ A. To gain profit

☐ B. To flatter somebody

☒ C. To bribe

☐ D. To cheat someone

Question ID : 1034357858

Q.12 In the given question, four words are given out of which one word is correctly spelt. Choose the correctly spelt word.

- Ans ☐ A. Forfieltt
☐ B. Forfette
☐ C. Forfiet
☒ D. Forfeit

Question ID : 1034357856

Q.13 A sentence has been given with a blank to be filled with an appropriate word. Choose the correct alternative.
 Either Vimla or Kamla _____ the cake.

- Ans ☐ A. make
☐ B. bake
☒ C. bakes
☐ D. eat

Question ID : 1034357851

Q.14 Find the part of the given sentence that has an error in it. If there is no error, choose 'No error'.
 The accelerated flow of goods, services and skills are(1)/one of the principal reasons for the (2)/ most rapid reduction of global poverty in history (3)/.No error (4)

- Ans ☒ A. 1
☐ B. 3
☐ C. 2
☐ D. 4

Question ID : 1034357847

Q.15 Rearrange the parts of the sentence in correct order.
 It was a large
 P: Square mahogany box
 Q: To open the lids at the top
 R: Well polished and there was a
 S: Handle you had to wind

- Ans ☐ A. PQRS
☐ B. RPSQ
☒ C. PRSQ
☐ D. PSQR

Question ID : 1034357852

Comprehension:

Read the following information carefully and answer the given questions.

Albert Einstein, German-born physicist who developed the special and general theories of relativity and won the Nobel Prize for Physics in 1921 for his explanation of the photoelectric effect. Einstein is generally considered the most influential physicist of the 20th century.

Einstein's parents were secular, middle-class Jews. His father, Hermann Einstein, was originally a featherbed salesman and later ran an electrochemical factory with moderate success. His mother, the former Pauline Koch, ran the family household. He had one sister, Maria, born two years after Albert.

Einstein would write that two "wonders" deeply affected his early years. The first was his encounter with a compass at age of five. He was mystified that invisible forces could deflect the needle. This would lead to a lifelong fascination with invisible forces. The second wonder came at age 12 when he discovered a book of geometry, which he devoured, calling it his "sacred little geometry book."

Einstein became deeply religious at age 12, even composing several songs in praise of God and chanting religious songs on the way to school. This began to change, however, after he read science books that contradicted his religious beliefs. This challenge to established authority left a deep and lasting impression. At the Luitpold Gymnasium, Einstein often felt out of place and victimized by a Prussian-style educational system that seemed to stifle originality and creativity. One teacher even told him that he would never amount to anything. Einstein's education was disrupted by his father's repeated failures at business. In 1894, after his company failed to get an important contract to electrify the city of Munich, Hermann Einstein moved to Milan to work with a relative. Einstein was left at a boarding house in Munich and expected to finish his education. Alone, miserable, and repelled by the looming prospect of military duty when he turned 16, Einstein ran away six months later and landed on the doorstep of his surprised parents. His parents realized the enormous problems that he faced as a school dropout and draft dodger with no employable skills. His prospects did not look promising.

Fortunately, Einstein later got admission to Eidgenössische Polytechnische Schule in Zurich. Einstein would recall that his years in Zürich were some of the happiest years of his life.

SubQuestion No : 16

Q.16 What contradicted Einstein's religious beliefs?

- Ans ☒ A. Science books
- ☐ B. His fathers' work tragedy
- ☐ C. Prussian-style educational system
- ☐ D. Book of geometry

Question ID : 1034357865

Comprehension:

Read the following information carefully and answer the given questions.

Albert Einstein, German-born physicist who developed the special and general theories of relativity and won the Nobel Prize for Physics in 1921 for his explanation of the photoelectric effect. Einstein is generally considered the most influential physicist of the 20th century.

Einstein's parents were secular, middle-class Jews. His father, Hermann Einstein, was originally a featherbed salesman and later ran an electrochemical factory with moderate success. His mother, the former Pauline Koch, ran the family household. He had one sister, Maria, born two years after Albert.

Einstein would write that two "wonders" deeply affected his early years. The first was his encounter with a compass at age of five. He was mystified that invisible forces could deflect the needle. This would lead to a lifelong fascination with invisible forces. The second wonder came at age 12 when he discovered a book of geometry, which he devoured, calling it his "sacred little geometry book."

Einstein became deeply religious at age 12, even composing several songs in praise of God and chanting religious songs on the way to school. This began to change, however, after he read science books that contradicted his religious beliefs. This challenge to established authority left a deep and lasting impression. At the Luitpold Gymnasium, Einstein often felt out of place and victimized by a Prussian-style educational system that seemed to stifle originality and creativity. One teacher even told him that he would never amount to anything. Einstein's education was disrupted by his father's repeated failures at business. In 1894, after his company failed to get an important contract to electrify the city of Munich, Hermann Einstein moved to Milan to work with a relative. Einstein was left at a boarding house in Munich and expected to finish his education. Alone, miserable, and repelled by the looming prospect of military duty when he turned 16, Einstein ran away six months later and landed on the doorstep of his surprised parents. His parents realized the enormous problems that he faced as a school dropout and draft dodger with no employable skills. His prospects did not look promising.

Fortunately, Einstein later got admission to Eidgenössische Polytechnische Schule in Zurich. Einstein would recall that his years in Zürich were some of the happiest years of his life.

SubQuestion No : 17

Q.17 The passage mainly talks about:

- Ans
- ☒ A. Einstein's interest in science
 - ☒ B. Graduation year of Einstein
 - ☒ C. Einstein's childhood struggles
 - ☒ D. Einstein's miseries in childhood

Question ID : 1034357862

Comprehension:

Read the following information carefully and answer the given questions.

Albert Einstein, German-born physicist who developed the special and general theories of relativity and won the Nobel Prize for Physics in 1921 for his explanation of the photoelectric effect. Einstein is generally considered the most influential physicist of the 20th century.

Einstein's parents were secular, middle-class Jews. His father, Hermann Einstein, was originally a featherbed salesman and later ran an electrochemical factory with moderate success. His mother, the former Pauline Koch, ran the family household. He had one sister, Maria, born two years after Albert.

Einstein would write that two "wonders" deeply affected his early years. The first was his encounter with a compass at age of five. He was mystified that invisible forces could deflect the needle. This would lead to a lifelong fascination with invisible forces. The second wonder came at age 12 when he discovered a book of geometry, which he devoured, calling it his "sacred little geometry book."

Einstein became deeply religious at age 12, even composing several songs in praise of God and chanting religious songs on the way to school. This began to change, however, after he read science books that contradicted his religious beliefs. This challenge to established authority left a deep and lasting impression. At the Luitpold Gymnasium, Einstein often felt out of place and victimized by a Prussian-style educational system that seemed to stifle originality and creativity. One teacher even told him that he would never amount to anything. Einstein's education was disrupted by his father's repeated failures at business. In 1894, after his company failed to get an important contract to electrify the city of Munich, Hermann Einstein moved to Milan to work with a relative. Einstein was left at a boarding house in Munich and expected to finish his education. Alone, miserable, and repelled by the looming prospect of military duty when he turned 16, Einstein ran away six months later and landed on the doorstep of his surprised parents. His parents realized the enormous problems that he faced as a school dropout and draft dodger with no employable skills. His prospects did not look promising.

Fortunately, Einstein later got admission to Eidgenössische Polytechnische Schule in Zurich. Einstein would recall that his years in Zürich were some of the happiest years of his life.

SubQuestion No : 18

Q.18 At what age, Einstein had an encounter with a compass?

- Ans
- ☒ A. 12 years
 - ☐ B. 20 years
 - ☒ C. 5 years
 - ☐ D. 16 years

Question ID : 1034357863

Comprehension:

Read the following information carefully and answer the given questions.

Albert Einstein, German-born physicist who developed the special and general theories of relativity and won the Nobel Prize for Physics in 1921 for his explanation of the photoelectric effect. Einstein is generally considered the most influential physicist of the 20th century.

Einstein's parents were secular, middle-class Jews. His father, Hermann Einstein, was originally a featherbed salesman and later ran an electrochemical factory with moderate success. His mother, the former Pauline Koch, ran the family household. He had one sister, Maria, born two years after Albert.

Einstein would write that two "wonders" deeply affected his early years. The first was his encounter with a compass at age of five. He was mystified that invisible forces could deflect the needle. This would lead to a lifelong fascination with invisible forces. The second wonder came at age 12 when he discovered a book of geometry, which he devoured, calling it his "sacred little geometry book."

Einstein became deeply religious at age 12, even composing several songs in praise of God and chanting religious songs on the way to school. This began to change, however, after he read science books that contradicted his religious beliefs. This challenge to established authority left a deep and lasting impression. At the Luitpold Gymnasium, Einstein often felt out of place and victimized by a Prussian-style educational system that seemed to stifle originality and creativity. One teacher even told him that he would never amount to anything. Einstein's education was disrupted by his father's repeated failures at business. In 1894, after his company failed to get an important contract to electrify the city of Munich, Hermann Einstein moved to Milan to work with a relative. Einstein was left at a boarding house in Munich and expected to finish his education. Alone, miserable, and repelled by the looming prospect of military duty when he turned 16, Einstein ran away six months later and landed on the doorstep of his surprised parents. His parents realized the enormous problems that he faced as a school dropout and draft dodger with no employable skills. His prospects did not look promising.

Fortunately, Einstein later got admission to Eidgenössische Polytechnische Schule in Zurich. Einstein would recall that his years in Zürich were some of the happiest years of his life.

SubQuestion No : 19

Q.19 What is the synonym of the word-'devoured' as used in the passage?

- Ans ☒ A. Build
☒ B. Absorbed
☒ C. Replaced
☒ D. Raised

Question ID : 1034357866

Comprehension:

Read the following information carefully and answer the given questions.

Albert Einstein, German-born physicist who developed the special and general theories of relativity and won the Nobel Prize for Physics in 1921 for his explanation of the photoelectric effect. Einstein is generally considered the most influential physicist of the 20th century.

Einstein's parents were secular, middle-class Jews. His father, Hermann Einstein, was originally a featherbed salesman and later ran an electrochemical factory with moderate success. His mother, the former Pauline Koch, ran the family household. He had one sister, Maria, born two years after Albert.

Einstein would write that two "wonders" deeply affected his early years. The first was his encounter with a compass at age of five. He was mystified that invisible forces could deflect the needle. This would lead to a lifelong fascination with invisible forces. The second wonder came at age 12 when he discovered a book of geometry, which he devoured, calling it his "sacred little geometry book."

Einstein became deeply religious at age 12, even composing several songs in praise of God and chanting religious songs on the way to school. This began to change, however, after he read science books that contradicted his religious beliefs. This challenge to established authority left a deep and lasting impression. At the Luitpold Gymnasium, Einstein often felt out of place and victimized by a Prussian-style educational system that seemed to stifle originality and creativity. One teacher even told him that he would never amount to anything. Einstein's education was disrupted by his father's repeated failures at business. In 1894, after his company failed to get an important contract to electrify the city of Munich, Hermann Einstein moved to Milan to work with a relative. Einstein was left at a boarding house in Munich and expected to finish his education. Alone, miserable, and repelled by the looming prospect of military duty when he turned 16, Einstein ran away six months later and landed on the doorstep of his surprised parents. His parents realized the enormous problems that he faced as a school dropout and draft dodger with no employable skills. His prospects did not look promising.

Fortunately, Einstein later got admission to Eidgenössische Polytechnische Schule in Zurich. Einstein would recall that his years in Zürich were some of the happiest years of his life.

SubQuestion No : 20

Q.20 All the given statements are correct EXCEPT:

- Ans ☒ A. Einstein ran away from a school he was first admitted to after first six months.
- ☒ B. Before Einstein acquired 16 years of age, he was left at a boarding house in Zurich to complete his school.
- ☒ C. In 1894, Einstein's education was disrupted because of his father's repeated failures at business.
- ☒ D. Einstein was two years older than her sister.

Question ID : 1034357864

Section : General Hindi

Q.1 दिए गए वाक्य में उपयुक्त विराम चिह्न का चयन कीजिए।
रुको रुको वह क्या कह रही है।

- Ans ☒ A. ,
- ☒ B. ;
- ☒ C. ,,
- ☒ D. " "

Question ID : 1034357879

Q.2 निम्नलिखित प्रश्न में, दिए गए चार विकल्पों में से, उस विकल्प का चयन करें जो दिए गए मुहावरे के अर्थ को सर्वश्रेष्ठ रूप से व्यक्त करता है।
पत्थर में दूब जमना

- Ans ☒ A. असम्भव बात होना
☐ B. सफलता मिलना
☐ C. काम बिगड़ जाना
☐ D. हानि पहुँचाना

Question ID : 1034357881

Q.3 दिए गए शब्दों की संधि विच्छेद ज्ञात कीजिए।
इतस्ततः

- Ans ☐ A. इति + स्ततः
☒ B. इतः + ततः
☐ C. इतः + स्त
☐ D. इता + सतः

Question ID : 1034357869

Q.4 निम्नलिखित प्रश्न में, दिए गए चार विकल्पों में से, उस विकल्प का चयन करें जो दिए गए मुहावरे के अर्थ को सर्वश्रेष्ठ रूप से व्यक्त करता है।
कंधा लगाना

- Ans ☐ A. प्रतिष्ठा खत्म करना
☐ B. कहे अनुसार करना
☒ C. मुसीबत को दूर करना
☐ D. मुसीबत मोल लेना

Question ID : 1034357880

Q.5 दिए गए वाक्य में उपयुक्त विराम चिह्न का चयन कीजिए।
मोहन बैंगलोर चला गया आप बेफिक्र रहें।

- Ans ☐ A. -
☒ B. ;
☐ C. .
☐ D. ...

Question ID : 1034357878

Q.6 निम्नलिखित वाक्यों में से सरल वाक्य ज्ञात कीजिए।

- Ans ☒ A. नेहा रात-भर परीक्षा में सफल होने के लिए पढ़ती है।
☐ B. नेहा रात-भर पढ़ती है, क्योंकि वह परीक्षा में सफल होना चाहती है।
☐ C. रात-भर नेहा इसलिए पढ़ती है कि वह परीक्षा में सफल हो जाए।
☐ D. नेहा रात-भर पढ़ती है जिससे परीक्षा में सफल हो सके।

Question ID : 1034357876

Q.7 निम्नलिखित में से कौन-सा शब्द विदेशी शब्द है?

- Ans ☒ A. पगड़ी
☒ B. रेडियो
☒ C. सर-सर
☒ D. कर्नाट

Question ID : 1034357867

Q.8 निम्नलिखित वाक्यों में से मिश्र वाक्य ज्ञात कीजिए।

- Ans ☒ A. अभिमीत, अभिषेक दोनों खेल रहे हैं।
☒ B. अभिमीत खेल रहा है क्योंकि उसके साथ अभिषेक भी है।
☒ C. अभिमीत और अभिषेक खेल रहे हैं।
☒ D. अभिमीत के साथ अभिषेक खेल रहा है।

Question ID : 1034357875

Q.9 दिए गए शब्द का पर्यायवाची शब्द ज्ञात कीजिए।
विष

- Ans ☒ A. हवा
☒ B. गरल
☒ C. अनिल
☒ D. पवन

Question ID : 1034357871

Q.10 निम्नलिखित वाक्यांश के लिए उचित शब्द का चयन कीजिए।
जो किसी विषय की विशेष जानकारी रखता हो

- Ans ☒ A. वैज्ञानिक
☒ B. वैद्य
☒ C. विषयासक्त
☒ D. विशेषज्ञ

Question ID : 1034357870

Q.11 दिए गए शब्द का उपसर्ग ज्ञात कीजिए।
अधोमुखी

- Ans ☒ A. अतः
☒ B. अध
☒ C. अधः
☒ D. अधो

Question ID : 1034357868

Q.12 दिए गए शब्द युग्म का सही शब्द युग्म ज्ञात कीजिए।
मनुज : मनोज

- Ans ☒ A. आनंद : रत्न
☒ B. बादल : यज्ञ
☒ C. जड़ : मस्त
☒ D. मनुष्य : कामदेव

Question ID : 1034357873

Q.13 दिए गए वाक्य की वृत्ति ज्ञात कीजिए।
एक गिलास पानी देना।

- Ans ☒ A. बाध्यता सूचक
☒ B. आज्ञार्थक
☒ C. संकेतार्थक
☒ D. निश्चियार्थक

Question ID : 1034357877

Q.14 निम्नलिखित शब्दों में से स्त्रीलिंग ज्ञात कीजिए।

- Ans ☒ A. दीवार
☒ B. परदा
☒ C. गैंडा
☒ D. दरवाजा

Question ID : 1034357874

Q.15 दिए गए शब्द युग्म का सही शब्द युग्म ज्ञात कीजिए।
बान : बाण

- Ans ☒ A. रंग : अक्षर
☒ B. आदत : तीर
☒ C. रास्ता : हिस्सा
☒ D. बहुत : मुख

Question ID : 1034357872

Comprehension:

एक गद्यांश दिया गया है। गद्यांश के आधार पर पाँच प्रश्न दिए गए हैं। गद्यांश को ध्यानपूर्वक पढ़ें तथा प्रत्येक प्रश्न में चार विकल्पों में से सही विकल्प चुने।

समाज के लिए समानता का अधिकार बहुत महत्वपूर्ण है। इस अधिकार का उद्देश्य कानून का शासन स्थापित करना है जहाँ पर कानून के समक्ष सभी नागरिकों के साथ समानता का व्यवहार किया जाता है। भारत में सभी लोगों को कानून का समान संरक्षण तथा कानून के समक्ष समानता उपलब्ध कराने के लिए पाँच प्रावधान (अनुच्छेद 14-18) किये गये हैं। यह धर्म, नस्ल, जाति, लिंग या जन्म स्थान के आधार पर किसी भेदभाव पर रोक लगाता है। संविधान यह सुनिश्चित करता है कि सभी नागरिक कानून के समक्ष समान होंगे। इसका तात्पर्य यह है कि देश के कानूनों द्वारा सभी को समान संरक्षण मिलेगा। कोई भी कानून से ऊपर नहीं है। इसका अर्थ है कि यदि दो व्यक्ति एक प्रकार का अपराध करते हैं तो उन्हें बिना किसी भेदभाव के समान दण्ड मिलेगा। राज्य धर्म, नस्ल, जाति, लिंग या जन्म स्थान के आधार पर किसी के साथ भेदभाव नहीं करेगा। यह सामाजिक समानता के लिए आवश्यक है। भारत के प्रत्येक नागरिक की दुकान, जलपान गृह, मनोरंजन के सार्वजनिक स्थानों तक समान पहुँच होगी तथा वह कुओं, तालाबों अथवा सड़कों का प्रयोग बिना किसी भेदभाव के कर सकता है। हालाँकि राज्य द्वारा महिलाओं और बच्चों के लिए विशेष प्रावधान व छूट की व्यवस्था की जा सकती है। सार्वजनिक रोजगार के मामलों में राज्य के द्वारा किसी के साथ कोई भेदभाव नहीं किया जायेगा। सभी नागरिक आवेदन कर सकते हैं तथा राज्य के कर्मचारी बन सकते हैं। वरीयता तथा योग्यता के आधार पर रोजगार उपलब्ध होंगे।

SubQuestion No : 16

Q.16 किस आधार पर रोजगार उपलब्ध होते हैं?

- Ans ☒ A. नागरिक
- ☒ B. योग्यता
- ☒ C. आवेदन
- ☒ D. धर्म

Question ID : 1034357884

Comprehension:

एक गद्यांश दिया गया है। गद्यांश के आधार पर पाँच प्रश्न दिए गए हैं। गद्यांश को ध्यानपूर्वक पढ़ें तथा प्रत्येक प्रश्न में चार विकल्पों में से सही विकल्प चुने।

समाज के लिए समानता का अधिकार बहुत महत्वपूर्ण है। इस अधिकार का उद्देश्य कानून का शासन स्थापित करना है जहाँ पर कानून के समक्ष सभी नागरिकों के साथ समानता का व्यवहार किया जाता है। भारत में सभी लोगों को कानून का समान संरक्षण तथा कानून के समक्ष समानता उपलब्ध कराने के लिए पाँच प्रावधान (अनुच्छेद 14-18) किये गये हैं। यह धर्म, नस्ल, जाति, लिंग या जन्म स्थान के आधार पर किसी भेदभाव पर रोक लगाता है। संविधान यह सुनिश्चित करता है कि सभी नागरिक कानून के समक्ष समान होंगे। इसका तात्पर्य यह है कि देश के कानूनों द्वारा सभी को समान संरक्षण मिलेगा। कोई भी कानून से ऊपर नहीं है। इसका अर्थ है कि यदि दो व्यक्ति एक प्रकार का अपराध करते हैं तो उन्हें बिना किसी भेदभाव के समान दण्ड मिलेगा। राज्य धर्म, नस्ल, जाति, लिंग या जन्म स्थान के आधार पर किसी के साथ भेदभाव नहीं करेगा। यह सामाजिक समानता के लिए आवश्यक है। भारत के प्रत्येक नागरिक की दुकान, जलपान गृह, मनोरंजन के सार्वजनिक स्थानों तक समान पहुँच होगी तथा वह कुओं, तालाबों अथवा सड़कों का प्रयोग बिना किसी भेदभाव के कर सकता है। हालाँकि राज्य द्वारा महिलाओं और बच्चों के लिए विशेष प्रावधान व छूट की व्यवस्था की जा सकती है। सार्वजनिक रोजगार के मामलों में राज्य के द्वारा किसी के साथ कोई भेदभाव नहीं किया जायेगा। सभी नागरिक आवेदन कर सकते हैं तथा राज्य के कर्मचारी बन सकते हैं। वरीयता तथा योग्यता के आधार पर रोजगार उपलब्ध होंगे।

SubQuestion No : 17

Q.17 संविधान के अनुसार यह कानून क्या सुनिश्चित करता है?

- Ans ☒ A. विचार-विमर्श की समस्या
- ☒ B. सार्वजनिक स्थानों पर भेदभाव
- ☒ C. समान संरक्षण
- ☒ D. दण्ड

Question ID : 1034357885

Comprehension:

एक गद्यांश दिया गया है। गद्यांश के आधार पर पाँच प्रश्न दिए गए हैं। गद्यांश को ध्यानपूर्वक पढ़ें तथा प्रत्येक प्रश्न में चार विकल्पों में से सही विकल्प चुनें।
समाज के लिए समानता का अधिकार बहुत महत्वपूर्ण है। इस अधिकार का उद्देश्य कानून का शासन स्थापित करना है जहाँ पर कानून के समक्ष सभी नागरिकों के साथ समानता का व्यवहार किया जाता है। भारत में सभी लोगों को कानून का समान संरक्षण तथा कानून के समक्ष समानता उपलब्ध कराने के लिए पाँच प्रावधान (अनुच्छेद 14-18) किये गये हैं। यह धर्म, नस्ल, जाति, लिंग या जन्म स्थान के आधार पर किसी भेदभाव पर रोक लगाता है। संविधान यह सुनिश्चित करता है कि सभी नागरिक कानून के समक्ष समान होंगे। इसका तात्पर्य यह है कि देश के कानूनों द्वारा सभी को समान संरक्षण मिलेगा। कोई भी कानून से ऊपर नहीं है। इसका अर्थ है कि यदि दो व्यक्ति एक प्रकार का अपराध करते हैं तो उन्हें बिना किसी भेदभाव के समान दण्ड मिलेगा। राज्य धर्म, नस्ल, जाति, लिंग या जन्म स्थान के आधार पर किसी के साथ भेदभाव नहीं करेगा। यह सामाजिक समानता के लिए आवश्यक है। भारत के प्रत्येक नागरिक की दुकान, जलपान गृह, मनोरंजन के सार्वजनिक स्थानों तक समान पहुँच होगी तथा वह कुओं, तालाबों अथवा सड़कों का प्रयोग बिना किसी भेदभाव के कर सकता है। हालाँकि राज्य द्वारा महिलाओं और बच्चों के लिए विशेष प्रावधान व छूट की व्यवस्था की जा सकती है। सार्वजनिक रोजगार के मामलों में राज्य के द्वारा किसी के साथ कोई भेदभाव नहीं किया जायेगा। सभी नागरिक आवेदन कर सकते हैं तथा राज्य के कर्मचारी बन सकते हैं। वरीयता तथा योग्यता के आधार पर रोजगार उपलब्ध होंगे।

SubQuestion No : 18

Q.18 उपर्युक्त गद्यांश का उपयुक्त शीर्षक क्या होगा?

- Ans ☒ A. जन्म स्थान के आधार पर भेदभाव
☒ B. विरोधी की समस्या
☒ C. समानता का अधिकार
☒ D. नारी व पुरुष में भेदभाव

Question ID : 1034357887

Comprehension:

एक गद्यांश दिया गया है। गद्यांश के आधार पर पाँच प्रश्न दिए गए हैं। गद्यांश को ध्यानपूर्वक पढ़ें तथा प्रत्येक प्रश्न में चार विकल्पों में से सही विकल्प चुनें।
समाज के लिए समानता का अधिकार बहुत महत्वपूर्ण है। इस अधिकार का उद्देश्य कानून का शासन स्थापित करना है जहाँ पर कानून के समक्ष सभी नागरिकों के साथ समानता का व्यवहार किया जाता है। भारत में सभी लोगों को कानून का समान संरक्षण तथा कानून के समक्ष समानता उपलब्ध कराने के लिए पाँच प्रावधान (अनुच्छेद 14-18) किये गये हैं। यह धर्म, नस्ल, जाति, लिंग या जन्म स्थान के आधार पर किसी भेदभाव पर रोक लगाता है। संविधान यह सुनिश्चित करता है कि सभी नागरिक कानून के समक्ष समान होंगे। इसका तात्पर्य यह है कि देश के कानूनों द्वारा सभी को समान संरक्षण मिलेगा। कोई भी कानून से ऊपर नहीं है। इसका अर्थ है कि यदि दो व्यक्ति एक प्रकार का अपराध करते हैं तो उन्हें बिना किसी भेदभाव के समान दण्ड मिलेगा। राज्य धर्म, नस्ल, जाति, लिंग या जन्म स्थान के आधार पर किसी के साथ भेदभाव नहीं करेगा। यह सामाजिक समानता के लिए आवश्यक है। भारत के प्रत्येक नागरिक की दुकान, जलपान गृह, मनोरंजन के सार्वजनिक स्थानों तक समान पहुँच होगी तथा वह कुओं, तालाबों अथवा सड़कों का प्रयोग बिना किसी भेदभाव के कर सकता है। हालाँकि राज्य द्वारा महिलाओं और बच्चों के लिए विशेष प्रावधान व छूट की व्यवस्था की जा सकती है। सार्वजनिक रोजगार के मामलों में राज्य के द्वारा किसी के साथ कोई भेदभाव नहीं किया जायेगा। सभी नागरिक आवेदन कर सकते हैं तथा राज्य के कर्मचारी बन सकते हैं। वरीयता तथा योग्यता के आधार पर रोजगार उपलब्ध होंगे।

SubQuestion No : 19

Q.19 राज्यों द्वारा महिलाओं व बच्चों को कौन सी व्यवस्था प्रदान की जाती है?

- Ans ☒ A. नागरिकता
☒ B. मनोरंजन
☒ C. जलपान गृह
☒ D. विशेष प्रावधान व छूट

Question ID : 1034357886

Comprehension:

एक गद्यांश दिया गया है। गद्यांश के आधार पर पाँच प्रश्न दिए गए हैं। गद्यांश को ध्यानपूर्वक पढ़ें तथा प्रत्येक प्रश्न में चार विकल्पों में से सही विकल्प चुने।

समाज के लिए समानता का अधिकार बहुत महत्वपूर्ण है। इस अधिकार का उद्देश्य कानून का शासन स्थापित करना है जहाँ पर कानून के समक्ष सभी नागरिकों के साथ समानता का व्यवहार किया जाता है। भारत में सभी लोगों को कानून का समान संरक्षण तथा कानून के समक्ष समानता उपलब्ध कराने के लिए पाँच प्रावधान (अनुच्छेद 14-18) किये गये हैं। यह धर्म, नस्ल, जाति, लिंग या जन्म स्थान के आधार पर किसी भेदभाव पर रोक लगाता है। संविधान यह सुनिश्चित करता है कि सभी नागरिक कानून के समक्ष समान होंगे। इसका तात्पर्य यह है कि देश के कानूनों द्वारा सभी को समान संरक्षण मिलेगा। कोई भी कानून से ऊपर नहीं है। इसका अर्थ है कि यदि दो व्यक्ति एक प्रकार का अपराध करते हैं तो उन्हें बिना किसी भेदभाव के समान दण्ड मिलेगा। राज्य धर्म, नस्ल, जाति, लिंग या जन्म स्थान के आधार पर किसी के साथ भेदभाव नहीं करेगा। यह सामाजिक समानता के लिए आवश्यक है। भारत के प्रत्येक नागरिक की दुकान, जलपान गृह, मनोरंजन के सार्वजनिक स्थानों तक समान पहुँच होगी तथा वह कुओं, तालाबों अथवा सड़कों का प्रयोग बिना किसी भेदभाव के कर सकता है। हालाँकि राज्य द्वारा महिलाओं और बच्चों के लिए विशेष प्रावधान व छूट की व्यवस्था की जा सकती है। सार्वजनिक रोजगार के मामलों में राज्य के द्वारा किसी के साथ कोई भेदभाव नहीं किया जायेगा। सभी नागरिक आवेदन कर सकते हैं तथा राज्य के कर्मचारी बन सकते हैं। वरीयता तथा योग्यता के आधार पर रोजगार उपलब्ध होंगे।

SubQuestion No : 20

Q.20 समाज के लिये कौन- सा अधिकार महत्वपूर्ण माना गया है?

- Ans
- ☒ A. भेदभाव
 - ☐ B. शासन स्थापित
 - ☐ C. जाति सम्बन्धित भेद-भाव
 - ☒ D. समानता

Question ID : 1034357883

Section : Discipline1

- Q.1 In the context of problem solving, which of the following statement is correct?
- I. Fabricus used a route planning task in which children were asked to devise a route that would allow them to retrieve a specified set of objects without any backtracking.
 - II. Gauvain and Rogoff attempted to explain problem-solving ability by using a balance beam.

- Ans
- ☒ A. Only I
 - ☐ B. Both I and II
 - ☐ C. Only II
 - ☐ D. Neither I nor II

Question ID : 1034357899

- Q.2 In the context of infant auditory-visual co-ordination, which of the following statement is correct?
- I. When the baby hears a sound, the eyes will be reoriented as if to discover the visual object at its source.
 - II. Butterworth and Castillo found in their study that the new born looked to the source of the sound.

- Ans
- ☐ A. Only II
 - ☐ B. Neither I nor II
 - ☐ C. Both I and II
 - ☒ D. Only I

Question ID : 1034357892

Q.3 In how many weeks, the first postural reflex is to be observed?

- Ans ☒ A. 28
☒ B. 32
☒ C. 20
☒ D. 24

Question ID : 1034357888

Q.4 In the context of studying infant perception, who was the pioneer of the visual preference method?

- Ans ☒ A. Baillageon
☒ B. Smith
☒ C. Robert Fantz
☒ D. Gibson

Question ID : 1034357897

Q.5 In the context of Altruism, which of the following statement is correct?
 I. It is the heart of prosocial behaviour.
 II. It is the behaviour that intended to help others out of inner concern and without expectation of external reward.

- Ans ☒ A. Neither I nor II
☒ B. Only II
☒ C. Only I
☒ D. Both I and II

Question ID : 1034357905

Q.6 In the context of one-parent family, which of the following statement is correct?
 I. Children in one-parent families tend to do more well socially and educationally than children in two-parent families.
 II. Children in one-parent families are more on their own. They tend to have more house hold responsibility.

- Ans ☒ A. Both I and II
☒ B. Neither I nor II
☒ C. Only I
☒ D. Only II

Question ID : 1034357906

Q.7 In the context of Baumrind's model, which of the following pair is correctly matched?
 I. Authoritarian parents – Value control and Unquestioning obedience
 II. Permissive parents – Value a child's individuality but also stress social constraints

- Ans ☒ A. Neither I nor II
☒ B. Both I and II
☒ C. Only II
☒ D. Only I

Question ID : 1034357904

Q.8 Which of the following baby motor development is correctly matched with their month?

- I. Lifts head up when prone - Second month
II. Rolls from side to side - Fifth month

- Ans ☒ A. Only II
☒ B. Neither I nor II
☒ C. Only I
☒ D. Both I and II

Question ID : 1034357889

Q.9 In the Piaget Theory, the limitations of thinking in the preoperational stage are best illustrated by children performance in _____.

- Ans ☒ A. Position tasks
☒ B. Conservation tasks
☒ C. Construction tasks
☒ D. Revolution tasks

Question ID : 1034357896

Q.10 Understanding their own emotions helps children _____.

- I. To guide their own behaviour in social situations
II. To talk about feelings

- Ans ☒ A. Neither I nor II
☒ B. Only I
☒ C. Only II
☒ D. Both I and II

Question ID : 1034357902

Q.11 Piaget divided symbolic play into how many stages?

- Ans ☒ A. Three
☒ B. Four
☒ C. Five
☒ D. Two

Question ID : 1034357900

Q.12 In the context of evolution of brain, which of the following statement is correct?

- I. The average weight of the brain in the newborn baby is 450 gm.
II. In the first week of foetal development the brain has taken on its adult shape.

- Ans ☒ A. Only II
☒ B. Both I and II
☒ C. Neither I nor II
☒ D. Only I

Question ID : 1034357890

Q.13 Hartshorn carried out a study with older infants using a task that involved learning to press a lever in order to make a model train move. Which of the following statement is NOT correct about the results of this study?
I. Nine-months olds remembering their previous learning for six-weeks.
II. Eighteen months olds remembering their previous learning for as long as fourteen weeks.

- Ans ☒ A. Both I and II
☒ B. Only II
☒ C. Only I
☒ D. Neither I nor II

Question ID : 1034357893

Q.14 _____ refers to the existence of more than one level of government in the country.

- Ans ☒ A. Sovereignty
☒ B. Secularism
☒ C. Monarchy
☒ D. Federalism

Question ID : 1034357907

Q.15 In the context of preoperational reasoning, who developed three mountain tasks?

- Ans ☒ A. Piaget
☒ B. Sreud
☒ C. Carey
☒ D. Gottlieb

Question ID : 1034357895

Q.16 In the context of play, which of the following statement is correct?

- I. Belsky and most found that, somewhere between the age of 12 and 18 months, the babies begin to play with objects in symbolic way.
II. Slade observed toddlers playing at home both on their own and with their mother.
III. O'Connell and Bretherton compared children's responses to mother's suggestions during play at the age of 20 and 28 months.

- Ans ☒ A. I, II and III
☒ B. I and III
☒ C. I and II
☒ D. II and III

Question ID : 1034357894

Q.17 Which of the following initiate the birth process?

- I. Foetal Pituitary
II. Adrenal System

- Ans ☒ A. Only II
☒ B. Only I
☒ C. Both I and II
☒ D. Neither I nor II

Question ID : 1034357891

Q.18 _____ is the first step in self concept development, in which the child labels himself or herself correctly and starts to categorize others accurately as male or female.

- Ans
- ☐ A. Religious identity
 - ☐ B. National identity
 - ☒ C. Gender identity
 - ☐ D. Cultural identity

Question ID : 1034357901

Q.19 Who wrote the book The Moral Judgment of the child?

- Ans
- ☐ A. Rubin
 - ☒ B. Piaget
 - ☐ C. Perry
 - ☐ D. Selman

Question ID : 1034357903

Q.20 "Reaching and grasping" is a important aspect of development in infancy, which of the following statement is correct about it?
I. Piaget thought that hand movements and vision are initially independent.
II. Bower noted that congenitally blind infants seem to go through a period of "hand regard".

- Ans
- ☐ A. Only I
 - ☐ B. Neither I nor II
 - ☐ C. Only II
 - ☒ D. Both I and II

Question ID : 1034357898

Section : Discipline2

Q.1 'You might have observed that in a class there are some students who learn more quickly while others learn slowly. In fact, the pace of learning differs from person to person.' This given statement represents which characteristic of learning process?

- Ans
- ☒ A. Learning is individualistic
 - ☐ B. Learning is intentional
 - ☐ C. Learning is goal directed
 - ☐ D. Learning is a continuous process

Question ID : 1034357919

Q.2 By which statement, many developing countries started reformulating their policies to promote the inclusion of student with disabilities into mainstream schools?

- Ans
- ☒ A. The Salamanca Statement, 1994
 - ☐ B. The Haiti Statement, 1994
 - ☐ C. The Mozambique Statement, 1994
 - ☐ D. The Angola Statement, 1994

Question ID : 1034357918

Q.3 Which of the following excerpts are correct with respect to Article 15 of the Indian Constitution?

- I. The State shall not discriminate against any citizen on grounds only of religion, race, caste, sex, place of birth or any of them.
- II. People should be prohibited on using of public wells.
- III. People should be given special privilege on the basis of their class.

- Ans
- ☒ A. II and III
 - ☒ B. I and II
 - ☒ C. I and III
 - ☒ D. Only I

Question ID : 1034357912

Q.4 'When one is confronted with a difficult problem, for which he/she does not have any readymade solution, then he/she will engage in a variety of different responses until one response produces a satisfying effect'. This type of learning is called _____.

- Ans
- ☒ A. Trial and error learning
 - ☒ B. Imitation learning
 - ☒ C. Observational learning
 - ☒ D. Discovery learning

Question ID : 1034357927

Q.5 In the context of Inclusive Education, Which of the following statement is correct?

- I. It denotes that all children irrespective of their strengths and weakness will be part of the mainstream education.
- II. It is clear that education policy in India has gradually increased the focus on children and adults with special needs.

- Ans
- ☒ A. Only II
 - ☒ B. Only I
 - ☒ C. Neither I nor II
 - ☒ D. Both I and II

Question ID : 1034357917

Q.6 A teacher can integrate curricular concepts in any familiar game and make the students play that game in the classroom. This method of teaching will provide which of the following advantages?

- Ans
- ☒ A. This will establish a control over the students
 - ☒ B. There will be more concentration but no tiredness
 - ☒ C. It will help them carry out difficult tasks in future
 - ☒ D. This will inhibit physical work

Question ID : 1034357923

Q.7 Which of the following is the role of teacher in the construction of knowledge of a student?

- I. Providing authentic tasks.
- II. Encouraging them to raise intelligent questions.
- III. Fostering reflective practice.

Ans ☒ A. I, II and III

☐ B. Only I

☐ C. I and II

☐ D. Only III

Question ID : 1034357922

Q.8 Which of the following statement is correct regarding 'Motor Reproduction Process' of observational learning?

- I. A person must have basic requirement for the action to be performed by him/her.
- II. Practice the sequence of actions observed repeatedly.

Ans ☐ A. Only I

☐ B. Neither I nor II

☒ C. Both I and II

☐ D. Only II

Question ID : 1034357921

Q.9 In which year was the first war of Indian independence fought?

Ans ☐ A. 1860

☐ B. 1858

☐ C. 1859

☒ D. 1857

Question ID : 1034357909

Q.10 In group learning, the grouping of students can be done in which of the following ways?

- I. Grouping by choice.
- II. Grouping by ability.
- III. Grouping by interest.

Ans ☐ A. II and III

☐ B. I and II

☐ C. Only I

☒ D. I, II and III

Question ID : 1034357924

Q.11 The sitting arrangement of students may vary from one activity to another. Which of the following sitting arrangement is used for group competition?

- I. Semi-circle arrangement
- II. Full circle arrangement

Ans ☒ A. Both I and II
☒ B. Only II
☒ C. Neither I nor II
☒ D. Only I

Question ID : 1034357926

Q.12 What is the benefit of Inclusive Education?

- I. Enhancing personal principles.
- II. Caring classroom environments.

Ans ☒ A. Only I
☒ B. Both I and II
☒ C. Neither I nor II
☒ D. Only II

Question ID : 1034357915

Q.13 Which of the following statements are correct?

- I. Gender is a socio-cultural construct.
- II. Gender is systemic.
- III. Sex is hierarchical.

Ans ☒ A. I and II
☒ B. I, II and III
☒ C. I and III
☒ D. Only III

Question ID : 1034357913

Q.14 Which of the following is correctly matched?

- I. Maria Montessori – Theory and practice of the Casa dei Bambini
- II. John Dewey – Establishment of an elementary level laboratory school in Chicago

Ans ☒ A. Only I
☒ B. Only II
☒ C. Neither I nor II
☒ D. Both I and II

Question ID : 1034357920

Q.15 Arrange the given steps involved in the demonstration method of teaching in the correct order and select the correct combination.

- A. Introduction
- B. Blackboard usage
- C. Concepts compilation
- D. Planning
- E. Demonstration

Ans ☒ A. BECDA
☒ B. ADECB
☒ C. DAEBE
☒ D. CDABE

Question ID : 1034357925

Q.16 Which statement is correct in respect with the Indian Parliament?

- I. It was created after 1947.
- II. Elections to the parliament are held in the same way as state legislature.
- III. The parliament comes under the judiciary.

Ans ☒ A. Only I
☒ B. I and II
☒ C. I and III
☒ D. II and III

Question ID : 1034357911

Q.17 Which chapter of the persons with Disability Act, 1995 ensures that every child with disability is entitled to a free education up to the age of 18 years?

Ans ☒ A. Chapter IV
☒ B. Chapter VII
☒ C. Chapter V
☒ D. Chapter VI

Question ID : 1034357916

Q.18 Which of the following are NOT included in the chapter VII of the The right to free and compulsory education act, 2009?

- I. Redressal of grievances
- II. Power to issue directions
- III. Pupil teacher Ratio

Ans ☒ A. I and III
☒ B. I and II
☒ C. Only I
☒ D. II and III

Question ID : 1034357910

Q.19 In which of the following did the women get the right to vote in 1928?

- Ans ☒ A. France
☒ B. United Kingdom
☒ C. India
☒ D. United States of America

Question ID : 1034357908

Q.20 Which of the following statements represents the term 'Gender Differences'?

- I. Household work is considered as a women's work.
 II. Any work outside home is believed to be for boys.

- Ans ☒ A. Only II
☒ B. Only I
☒ C. Neither I nor II
☒ D. Both I and II

Question ID : 1034357914

Section : Discipline3

Q.1 Problem solving skills includes which of the following skills?

- I. Observation
 II. Experimentation
 III. Estimation

- Ans ☒ A. Only III
☒ B. I and II
☒ C. II and III
☒ D. I, II and III

Question ID : 1034357941

Q.2 Information Technology refers to -----.

- I. Hardware of information collection
 II. Software of information collection

- Ans ☒ A. Only I
☒ B. Both I and II
☒ C. Only II
☒ D. Neither I nor II

Question ID : 1034357928

Q.3 Which of the following combination is NOT correct about the Piaget's stages of cognitive development?

- Ans ☒ A. Pre-operational - Inability to conserve
☒ B. Formal operation - No language and No thought
☒ C. Concrete operations - Understanding of numbers
☒ D. Sensorimotor - No Idea of objective reality

Question ID : 1034357932

Q.9 Which of the following is correct about the stages of language acquisition?

- I. Paapaa (Father) – One-word stage
- II. I am singing – Longer utterances
- III. Ball dedo (Asking for something) – Two-word stage

Ans ☒ A. Only I

☒ B. II and III

☒ C. Only II

☒ D. I, II and III

Question ID : 1034357933

Q.10 From the Environmental studies textbooks of NCERT, you would find the presentation of content that is having balance between _____.

- I. rural and urban development
- II. gender equality and sensitization
- III. religions

Ans ☒ A. I, II and III

☒ B. Only II

☒ C. II and III

☒ D. Only III

Question ID : 1034357946

Q.11 Acting silently without speaking also known as _____.

Ans ☒ A. listening

☒ B. miming

☒ C. shouting

☒ D. singing

Question ID : 1034357935

Q.12 In NCF 2005, it has been categorically stated that at the elementary level, teaching must be _____.

- I. learner centered
- II. teacher centered

Ans ☒ A. Only I

☒ B. Only II

☒ C. Neither I nor II

☒ D. Both I and II

Question ID : 1034357945

Q.13 Which of the following are the major aims of mathematics?

- I. To develop the powers of thinking and reasoning.
- II. To solve mathematical problems of daily life.
- III. To prepare the child for higher study.

Ans ☒ A. Only II

☒ B. I and II

☒ C. I, II and III

☒ D. II and III

Question ID : 1034357943

Q.14 Social _____ are prominently observed as the way we use language.

I. Differences

II. Stratifications

Ans ☒ A. Both I and II

☐ B. Neither I nor II

☐ C. Only II

☐ D. Only I

Question ID : 1034357938

Q.15 Which of the following pair is correctly matched in the context of language?

I. Formal Context – Family, Friend and Neighbourhood

II. Informal Context – School, Teachers and Materials

Ans ☐ A. Both I and II

☐ B. Only I

☒ C. Neither I nor II

☐ D. Only II

Question ID : 1034357939

Q.16 In every field of physical science mathematics plays vital role in explaining various phenomena such as _____.

I. Mechanics

II. Sound

III. Chemical reactions

IV. Light

Ans ☐ A. II and IV

☐ B. II, III and IV

☐ C. I, II and III

☒ D. I, II, III and IV

Question ID : 1034357942

Q.17 _____ is an electronic device that accepts data then process data, gives the output (result) and store the output.

Ans ☐ A. Telephone

☐ B. Cable Satellite

☐ C. DVD

☒ D. Computer

Question ID : 1034357929

Q.18 At what age group, a child is able to comprehend the grammar of not only one language but 2 to 3 languages?

Ans ☒ A. 3 years to 4 years

☐ B. 9 years to 10 years

☐ C. 6 years to 7 years

☐ D. 6 months to 1 year

Question ID : 1034357934

Q.19 Nepali language was included in the 8th schedule of the Indian constitution through which Constitutional Amendment Act?

- Ans ☒ A. 71st Constitutional Amendment Act 1992
- ☒ B. 74th Constitutional Amendment Act 1992
- ☒ C. 72nd Constitutional Amendment Act 1992
- ☒ D. 73rd Constitutional Amendment Act 1992

Question ID : 1034357940

Q.20 Which of the following combination is NOT correct?

- I. Operant conditioning – Ivan Pavlov
II. Classical conditioning – B.F skinner

- Ans ☒ A. Both I and II
- ☒ B. Only II
- ☒ C. Neither I nor II
- ☒ D. Only I

Question ID : 1034357931

Section : Discipline4

Q.1 According to Kurt Lewin, an adolescent between the two worlds is a/an _____.

- Ans ☒ A. Marginal man
- ☒ B. Psychological man
- ☒ C. Extra ordinary man
- ☒ D. Social man

Question ID : 1034357960

Q.2 Curricular activities have educational values. What are those values?

- I. Language and expression improves through debate and recitation.
II. Teaching of history gets vitalised by dramatisation.
III. Projects provide direct learning opportunities.

- Ans ☒ A. II and III
- ☒ B. Only III
- ☒ C. I and II
- ☒ D. I, II and III

Question ID : 1034357954

Q.3 Which of the following factors exacerbates the identity crisis for Indian adolescents?

- I. Breaking down of traditional values.
- II. Absence of adult support.
- III. Rapid changes in the socio-cultural experiences of the adolescents.

Ans ☒ A. I, II and III

☐ B. II and III

☐ C. I and II

☐ D. Only I

Question ID : 1034357958

Q.4 Hurlock suggested different periods within the adolescence span. Which of the following periods is correctly matched with average age?

- I. Pre-adolescence – 10 to 12 years
- II. Early-adolescence – 13 to 16 years
- III. Late-adolescence – 17 to 21 years

Ans ☐ A. Only II

☐ B. Only I

☐ C. II and III

☒ D. I, II and III

Question ID : 1034357957

Q.5 According to Kett, the emergence of adolescence as a period distinct from childhood and adulthood can be attributed to a consequence of which of the following events?

- I. Compulsory education in America.
- II. Industrialization.

Ans ☐ A. Only I

☐ B. Only II

☒ C. Both I and II

☐ D. Neither I nor II

Question ID : 1034357961

Q.6 The emergence of puberty heralds the physical changes like growth spurt. The growth spurt in girls begins at about _____.

Ans ☒ A. 10-12 years

☐ B. 12-14 years

☐ C. 8-10 years

☐ D. 15-16 years

Question ID : 1034357956

Q.7 What are the aims and objectives of Yoga education?
I. It enables the students to have good fitness.
II. It enables the students to possess emotional stability.
III. It integrates moral and spiritual values.

- Ans ☒ A. II and III
☒ B. Only III
☒ C. Only I
☒ D. I, II and III

Question ID : 1034357955

Q.8 For proper drainage system, which of the following steps should be taken by school authorities?
I. Regular repair of pipelines to avoid water clogging.
II. Classrooms should have warm colour paints on walls to give more lighting effect.
III. Regular cleaning of drains by local bodies to avoid blockage.

- Ans ☒ A. II and III
☒ B. Only III
☒ C. I and III
☒ D. I, II and III

Question ID : 1034357965

Q.9 How many players are there in a football team excluding goalkeeper?

- Ans ☒ A. 9
☒ B. 8
☒ C. 11
☒ D. 10

Question ID : 1034357953

Q.10 In India the revised framework for adolescence education developed in 2003-04, which of the following dimensions was not present in the general framework of 1993-96?

- Ans ☒ A. Growing up healthy
☒ B. Prevention of HIV/AIDS
☒ C. Prevention of substance abuse
☒ D. Development of life-skills education

Question ID : 1034357962

Q.11 Poor health may reduce learning for a variety of reasons. Which of the following are those reasons?
I. Less efficiency learning per day spent in school.
II. Lower daily attendance.

- Ans ☒ A. Only I
☒ B. Only II
☒ C. Neither I nor II
☒ D. Both I and II

Question ID : 1034357963

Q.12 All the types of systems except _____ are defined in Bronfenbrenner's ecological theory.

- Ans ☒ A. Sociosystem
☒ B. Microsystem
☒ C. Mesosystem
☒ D. Chronosystem

Question ID : 1034357959

Q.13 Which of the following is the contemporary topic of visual art?
I. Photography, computer art
II. Video film

- Ans ☒ A. Only I
☒ B. Both I and II
☒ C. Neither I nor II
☒ D. Only II

Question ID : 1034357949

Q.14 Which factors affect diet?
I. Climate factors, health status and growth.
II. Eating habits and social customs.

- Ans ☒ A. Only II
☒ B. Only I
☒ C. Both I and II
☒ D. Neither I nor II

Question ID : 1034357964

Q.15 "Creation is calling into existence what previously has no form or feature". This statement is quoted by which famous person?

- Ans ☒ A. Herbert Read
☒ B. Dike Blair
☒ C. Sarah Sze
☒ D. Mark Leckey

Question ID : 1034357951

Q.16 What is NOT a benefit of sports and games?

- Ans ☒ A. Builds a sense of teamwork
☒ B. Increases mental health
☒ C. Decreases stamina
☒ D. Stress - relieving

Question ID : 1034357952

Q.17 What are the components of social studies?

- I. Your housing situation.
- II. Positive interactions with your community (i.e. volunteer work).
- III. The caring and healthy relationship you have in your life.

Ans ☒ A. I, II and III

☐ B. Only II

☐ C. I and II

☐ D. I and III

Question ID : 1034357966

Q.18 Which science subjects study the life of animals and plants?

Ans ☐ A. Physical science

☒ B. Biological science

☐ C. Social science

☐ D. Mathematical science

Question ID : 1034357948

Q.19 Which of the following statement is correct in reference with Art-making?

- I. It helps in brain development.
- II. It diminishes the student's aesthetic sensibilities.

Ans ☐ A. Both I and II

☒ B. Only I

☐ C. Neither I nor II

☐ D. Only II

Question ID : 1034357950

Q.20 With respect to clean toilets and urinals, what is the role of school authorities?

- I. Proper locking system (Bolts and handles).
- II. Toilet block should be cleaned twice a day.
- III. Toilet and urinal should not be physical challenged friendly.
- IV. Sanitation facility should not contaminate ground water.

Ans ☐ A. I, II, III and IV

☒ B. I, II and IV

☐ C. I, III and IV

☐ D. I, II and III

Question ID : 1034357967

Q.1 Which of the following statement is correct in the context of teacher multifarious role?

- I. Teacher acts as a school-community bridge.
- II. Teacher also acts as a administration head in their district.

Ans ☒ A. Neither I nor II
☒ B. Only II
☒ C. Only I
☒ D. Both I and II

Question ID : 1034357985

Q.2 Which of the following is the instruction of leadership?

- I. Adoption of the model led to the participation of teachers in management decisions.
- II. The head teacher was popularly viewed as the source of educational expertise.

Ans ☒ A. Only II
☒ B. Neither I nor II
☒ C. Only I
☒ D. Both I and II

Question ID : 1034357981

Q.3 Which of the following statement is correct in the context of contribution of community in education?

- I. Providing financial support.
- II. Academic and administrative help.
- III. Determine the syllabus.

Ans ☒ A. I, II and III
☒ B. II and III
☒ C. I and III
☒ D. I and II

Question ID : 1034357977

Q.4 "Knowledge gained through experience is far superior and many times more useful than bookish knowledge". This statement is quoted by whom?

Ans ☒ A. Mahatma Gandhi
☒ B. Subhash Chandra Bose
☒ C. Bhagat Singh
☒ D. Jawaharlal Nehru

Question ID : 1034357970

Q.5 Which of the following objective is included in implementation of work education?

- I. To develop capacity and ability.
- II. To boost understanding.

Ans ☒ A. Only II
☒ B. Neither I nor II
☒ C. Both I and II
☒ D. Only I

Question ID : 1034357972

Q.6 Which of the following is the characteristic of Management?

- I. Define purpose, goals and outcomes.
II. Set policy and strategy.

Ans ☒ A. Neither I nor II

☒ B. Both I and II

☒ C. Only II

☒ D. Only I

Question ID : 1034357982

Q.7 At what level, Sarva Shiksha Abhiyan build the structure?

- I. Village and Block
II. Cluster and School

Ans ☒ A. Neither I nor II

☒ B. Only I

☒ C. Both I and II

☒ D. Only II

Question ID : 1034357976

Q.8 Parent Teacher Association ensure _____.

- I. community ownership
II. community participation in education

Ans ☒ A. Only II

☒ B. Only I

☒ C. Neither I nor II

☒ D. Both I and II

Question ID : 1034357987

Q.9 An educational institution is greatly influenced by _____.

- I. culture
II. climate

Ans ☒ A. Only II

☒ B. Neither I nor II

☒ C. Only I

☒ D. Both I and II

Question ID : 1034357979

Q.10 Which of the following pair is correctly matched?

Ans ☒ A. Regular cleaning – To avoid blockage

☒ B. Repair pipeline – To stop insects breeding

☒ C. Covered drains – To avoid blockage

☒ D. Use disinfectant – To avoid casualty

Question ID : 1034357968

Q.11 In India, what is community mobilization?

- I. Community identify and use available resource and plan accordingly.
- II. Important decisions are usually made by ministers of parliament in Rajya Sabha.

Ans ☒ A. Both I and II
☒ B. Only II
☒ C. Neither I nor II
☒ D. Only I

Question ID : 1034357986

Q.12 Which of the following statement is correct in the context of the Karnataka community participation in education?

- I. Sanghas are running balwadis with no financial assistance.
- II. Sanghas consisting of women are playing active role in enrolling children into primary schools.

Ans ☒ A. Both I and II
☒ B. Only I
☒ C. Only II
☒ D. Neither I nor II

Question ID : 1034357978

Q.13 What are the essential factors for the success of work education?

- I. Unproductive aptitude
- II. Co-operating mindset
- III. Broadmindedness

Ans ☒ A. I, II and III
☒ B. Only I
☒ C. II and III
☒ D. I and II

Question ID : 1034357971

Q.14 Which of the following activities can be organized in the school?

- I. Programme related to cleanliness activities.
- II. Organize interviews of artisans.
- III. Organize health campaigns.
- IV. Making government policies.

Ans ☒ A. I, II and III
☒ B. II, III and IV
☒ C. I and II
☒ D. I, II, III and IV

Question ID : 1034357973

Q.15 _____ was implemented as one of India's flagship programmes for universalising elementary education.
I. Sarva Shiksha Abhiyan
II. Parent Teacher Association

- Ans ☒ A. Only I
☒ B. Only II
☒ C. Both I and II
☒ D. Neither I nor II

Question ID : 1034357980

Q.16 Physical labour is essential for _____.
I. physical health
II. mental health

- Ans ☒ A. Only I
☒ B. Only II
☒ C. Both I and II
☒ D. Neither I nor II

Question ID : 1034357969

Q.17 Which commission observed that teachers are the single most important element of the school system?

- Ans ☒ A. The Education Commission
☒ B. University Education Commission
☒ C. National Knowledge Commission
☒ D. Secondary Education Commission

Question ID : 1034357984

Q.18 To understand ourselves, we must be aware of our relationship with _____.
I. People
II. Ideas
III. Nature

- Ans ☒ A. II and III
☒ B. I, II and III
☒ C. Only III
☒ D. Only II

Question ID : 1034357975

Q.19 Which of the following statement is correct in the context of the role of teachers?
I. A teacher plays a pivotal role in school system.
II. A teacher is responsible for the educational activities in the school.

- Ans ☒ A. Only I
☒ B. Neither I nor II
☒ C. Both I and II
☒ D. Only II

Question ID : 1034357983

Q.20 What do we mean by the 'right kind of education'?

I. Awakening of intelligence.

II. Fostering of an integrated life.

Ans ☒ A. Only II

☒ B. Neither I nor II

☒ C. Both I and II

☒ D. Only I

Question ID : 1034357974

