

**8 GGG6
DF H**

Previous Year Paper

(Assistant Teacher Primary)

26 March 2022 Shift 1

(English)

Adda247

Test Prime

ALL EXAMS, ONE SUBSCRIPTION



80,000+
Mock Tests



**Personalised
Report Card**



**Unlimited
Re-Attempt**



600+
Exam Covered



20,000+ Previous
Year Papers



500%
Refund



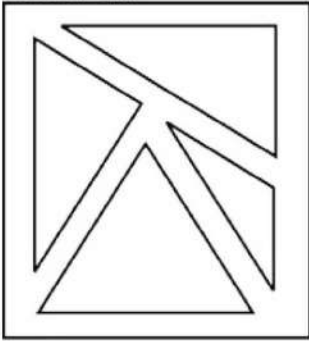
ATTEMPT FREE MOCK NOW

Test Date	26/03/2022
Test Time	8:30 AM - 10:30 AM
Subject	ASSISTANT TEACHER PRIMARY

Section : Mental Ability

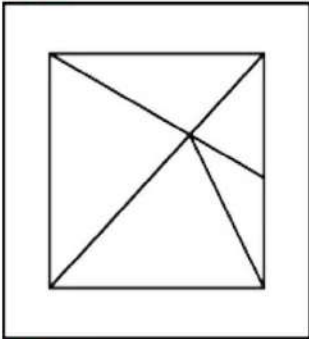


Q.1 Identify the answer figure from which the pieces given in the question figure have been cut out.



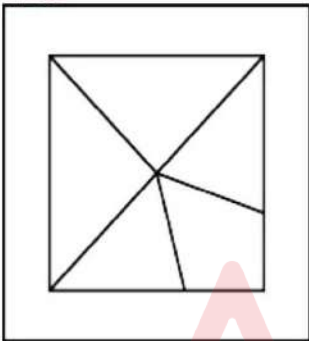
Ans ☒ A. D

IMAGE



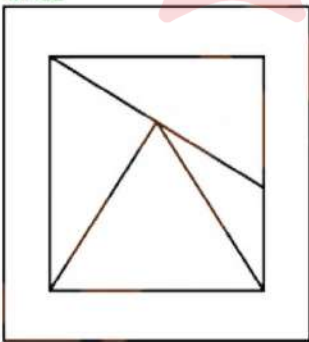
☒ B. A

IMAGE



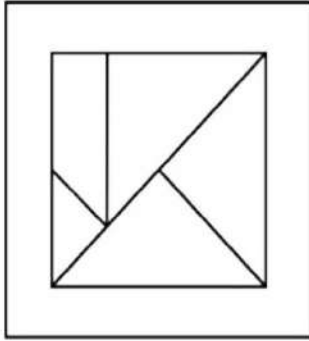
☒ C. B

IMAGE



☒ D. C

IMAGE



Question ID : 75322912166

Q.2 Select the option that is related to the third term on the same basis as the second term is related to the first term.

Goat: Lion :: Grass: ?

- Ans
- ☒ A. Tiger
 - ☒ B. Food
 - ☒ C. Goat
 - ☒ D. Hunter

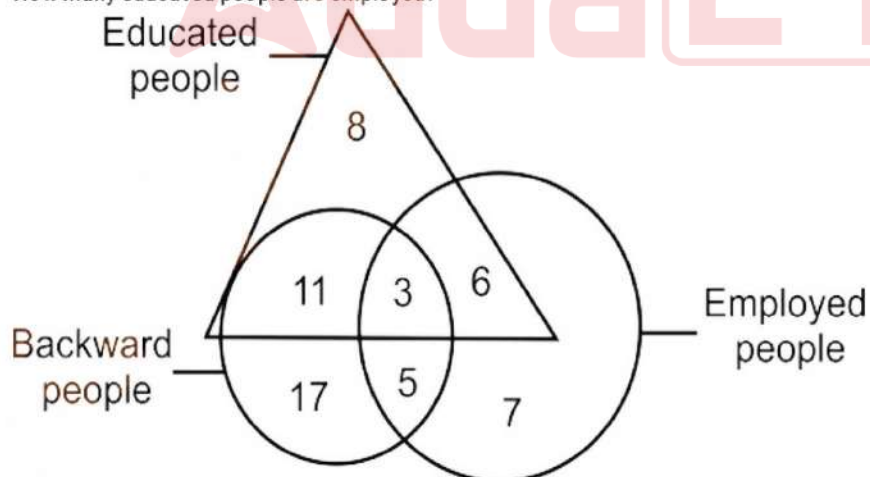
Question ID : 75322912154

Q.3 Out of the given options, three are similar in a certain manner. However, one option is NOT like the other three. Select the option which is different from the rest.

- Ans
- ☒ A. 120
 - ☒ B. 24
 - ☒ C. 6
 - ☒ D. 64

Question ID : 75322912163

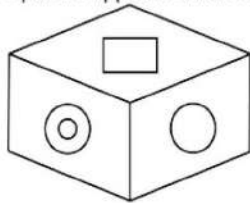
Q.4 The given Venn diagram shows people who are educated, backward and employed. How many educated people are employed?



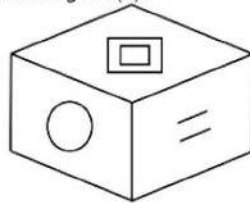
- Ans
- ☒ A. 9
 - ☒ B. 18
 - ☒ C. 15
 - ☒ D. 20

Question ID : 75322912164

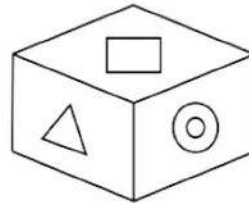
Q.5 Given below are three positions of the same dice. Which of the symbols in the options appears at the bottom in figure (ii)?



(i)



(ii)



(iii)

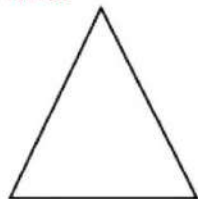
Ans ☒ A. A

IMAGE




☒ B. B

IMAGE



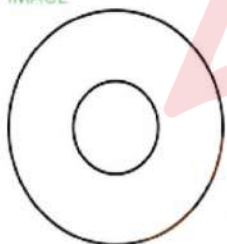
☒ C. D

IMAGE



☒ D. C

IMAGE



Question ID : 75322912165

Q.6 Out of the given options, three are similar in a certain manner. However, one option is NOT like the other three. Select the option which is different from the rest.

Ans ☒ A. Divulge

☒ B. Conceal

☒ C. Hide

☒ D. Cover

Question ID : 75322912153

Q.7 C is B's wife, E is C's son, A is B's brother and D's father. How is E related to D?

Ans ☒ A. Mother

☒ B. uncle's son

☒ C. Father

☒ D. Sister

Question ID : 75322912157

Q.8 Select the option that is related to the third term on the same basis as the second term is related to the first term.

BAD : CBE :: ? : IVSU

Ans ☒ A. HURT

☒ B. GOOD

☒ C. HALT

☒ D. HSPR

Question ID : 75322912155

Q.9 In a truck, there are 50 ducks, alongwith 45 cows and 8 sheeps and some keepers. If the total number of feet is 224 more than the number of heads in the truck, then find the number of keepers.

Ans ☒ A. 10

☒ B. 15

☒ C. 8

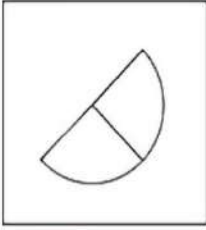
☒ D. 5

Question ID : 75322912159

Q.10 Out of the given options, three are similar in a certain manner. However, one option is NOT like the other three. Select the option which is different from the rest.

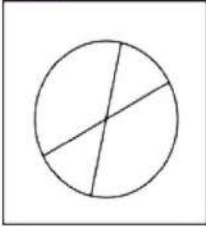
Ans ☒ A. A

IMAGE



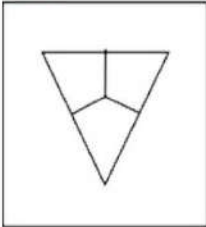
☒ B. C

IMAGE




☒ C. D

IMAGE



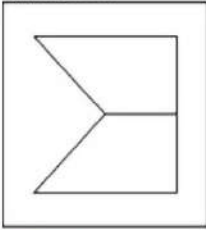
☒ D. B

IMAGE



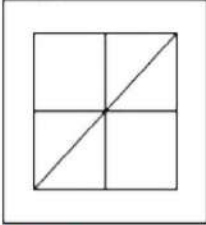
Question ID : 75322912168

Q.11 From the given answer figures, select the one in which the question figure is embedded.



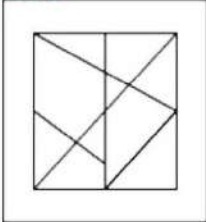
Ans ☒ A. A

IMAGE



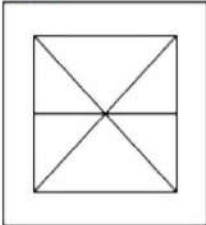
☒ B. B

IMAGE




☒ C. C

IMAGE



☒ D. D

IMAGE



Question ID : 75322912169

Q.12 एक तस्वीर की ओर इशारा करते हुए, सीमा ने अपने पति से कहा, "उसके भाई के पिता मेरे दादा के इकलौते पुत्र हैं"। सीमा फोटो में दिख रहे व्यक्ति से कैसे संबंधित है?

Ans ☒ A. बहन

☒ B. पुत्री

☒ C. बुआ

☒ D. माता

Question ID : 75322912158

Q.13 In the question a statement is given, followed by three conclusions, I, II and III. You have to consider the statement to be true even if it seems to be at variance from commonly known facts. You have to decide which of the given conclusions, if any, follows from the given statements.

Statement : Ministers arrived at the public function in their cars.

Conclusion I : All ministers are rich.

Conclusion II : Ministers have cars.

Conclusion III : Ministers visited a public function.

- Ans
- ☐ A. Only conclusion II follows
 - ☐ B. Only conclusion I and III follow
 - ☐ C. Only conclusion I and II follow
 - ☒ D. Only conclusion II and III follow

Question ID : 75322912160

Q.14 In the question one statement is given, followed by three assumptions, I, II and III. You have to consider the statements to be true even if it seems to be at variance from commonly known facts. You have to decide which of the given assumptions, if any, follows from the given statement.

Statement: "If you want best training in civil services, join our classes 'Z' " An advertisement said.

Assumption I : People want training for civil services.

Assumption II : People read advertisements.

Assumption III : People want quality training.

- Ans
- ☐ A. Only assumption I and III are implicit
 - ☐ B. Only assumption I and II are implicit
 - ☒ C. All are implicit
 - ☐ D. Only assumption II is implicit

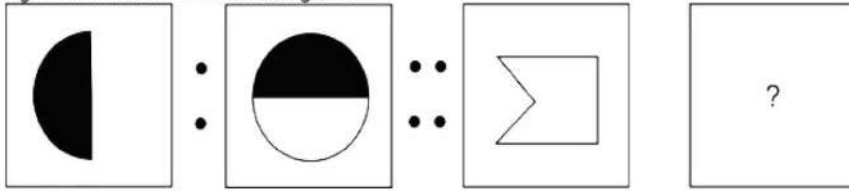
Question ID : 75322912161

Q.15 Select the option that is related to the third term on the same basis as the second term is related to the first term.
121: 1331 :: 141: ?

- Ans
- ☒ A. 1692
 - ☐ B. 1421
 - ☐ C. 1441
 - ☐ D. 1661

Question ID : 75322912162

Q.16 Select the option that is related to the third figure on the same basis as the second figure is related to the first figure.




Ans ✓ A. D

IMAGE



✗ B. A

IMAGE



✗ C. C

IMAGE



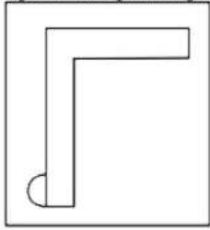
✗ D. B


IMAGE



Question ID : 75322912167

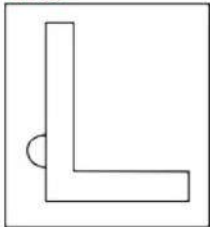
Q.17 If a mirror is placed on the line AB, then which of the answer figures is the right image of the given figure?



A  B

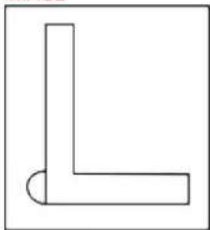
Ans ☒ A. D

IMAGE



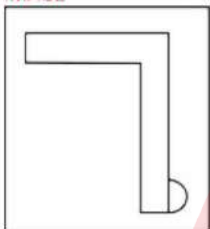
☒ B. A

IMAGE



☒ C. C

IMAGE



☒ D. B

IMAGE



Question ID : 75322912170

Q.18 Complete the following letter series:
dd_a_abb_c_c

Ans ☒ A. dacc

☒ B. dabc

☒ C. aacc

☒ D. aabc

Question ID : 75322912151

Q.19 If rod is called stick, stick is called ink, ink is called needle, needle is called thread and thread is called rope, what is used for writing?

Ans ☒ A. needle

☐ B. thread

☐ C. stick

☐ D. ink

Question ID : 75322912156

Q.20 Select the option that is related to the third term on the same basis as the second term is related to the first term.

AZ : 27 :: MN : _

Ans ☐ A. 32

☐ B. 25

☐ C. 12

☒ D. 27

Question ID : 75322912152

Section : General Awareness

Q.1 NACH System can be used for making bulk transactions towards the distribution of subsidies, dividends, interest, salary, pension, etc. What is the full form of NACH?

Ans ☐ A. National Automated Clearing Home

☒ B. National Automated Clearing House

☐ C. National Automatic Clearing House

☐ D. National Automated Cash House

Question ID : 75322912174

Q.2 Which country produces maximum gold in the world?

Ans ☐ A. Mexico

☒ B. China

☐ C. Germany

☐ D. Japan

Question ID : 75322912180

Q.3 The Tripitaka is a term for a _____ canon of scriptures.

Ans ☒ A. Buddhist

☐ B. Jain

☐ C. Hindu and Buddhist both

☐ D. Hindu

Question ID : 75322912183

Q.4 Currently(as on August 2021), who is the President of the Indian Olympic Association (IOA)?

- Ans ☐ A. Narayana Ramachandran
☐ B. Rajeev Mehta
☐ C. Sir Dorabji Tata
☒ D. Narinder Batra

Question ID : 75322912190

Q.5 Water that has been disinfected with iodine is not recommended for:

- Ans ☐ A. Children less than 10 years of age
☐ B. People with skin problems
☐ C. Old age people
☒ D. Pregnant women

Question ID : 75322912175

Q.6 _____ is one of the official languages of the Sikkim state.

- Ans ☒ A. Nepali
☐ B. Hindi
☐ C. Mizo
☐ D. Sanskrit

Question ID : 75322912172

Q.7 The book, 'Home in the World' is written by which author?

- Ans ☐ A. Vijay Gokhale
☒ B. Amartya Sen
☐ C. Hisila Yami
☐ D. Amitav Ghosh

Question ID : 75322912186

Q.8 Nuakhai Juhar is the agricultural festival and one of the most ancient festivals mainly observed by the people of _____.

- Ans ☐ A. Western Gujarat and Southern Rajasthan
☐ B. Western Mizoram and Southern Meghalaya
☒ C. Western Odisha and Southern Chhattisgarh
☐ D. Western Punjab and Southern Haryana

Question ID : 75322912171

Q.9 Which line/boundary separates India and Pakistan?

- Ans ☐ A. Siegfried Line
☐ B. McMahon Line
☒ C. Radcliffe Line
☐ D. Marginal Line

Question ID : 75322912179

Q.10 Currently(as on August 2021), how many Schedules does the Indian Constitution have?

- Ans ☐ A. 11
☒ B. 12
☐ C. 8
☐ D. 10

Question ID : 75322912187

Q.11 Chlorination of water is the_____method to purify water.

- Ans ☒ A. Cheaper than other
☐ B. One and only
☐ C. Wrong
☐ D. Costly than other

Question ID : 75322912176

Q.12 The current (as of June 4th, 2021) Statutory Liquidity Ratio (SLR) is:

- Ans ☐ A. 15.00%
☒ B. 18.00%
☐ C. 13.00%
☐ D. 19.00%

Question ID : 75322912173

Q.13 Which Indian contemporary artist won the Artes Mundi Prize, recently?

- Ans ☐ A. Prabhookar Pachpute
☐ B. Pradeep Pachpute
☐ C. Pitamber Pachpute
☒ D. Prabhakar Pachpute

Question ID : 75322912185

Q.14 The total number of Buddhist Councils are there:

- Ans ☐ A. Three
☒ B. Six
☐ C. Five
☐ D. Seven

Question ID : 75322912182

Q.15 The One Hundred and Fourth (104th) Amendment of the Constitution of India is for:

- Ans ☐ A. It applies to citizens who belong to the economically weaker section from the upper castes.
- ☐ B. It defines powers of the state legislature and the Centre to regulate incorporation, elections and governing of these cooperative societies. For multi-state cooperatives and Union Territories, Parliament has the power to issue regulations.
- ☒ C. It extends the deadline for the cessation for the reservation of seats for members from Scheduled Castes and Scheduled Tribes in the Lok Sabha and State Legislative Assemblies by a period of 10 years
- ☐ D. It introduced a national Goods and Services Tax (GST) in India from 1 July 2017. It replaces all indirect taxes levied on goods and services by the Indian Central and State governments.

Question ID : 75322912188

Q.16 Which vitamin is also known as ascorbic acid?

- Ans ☒ A. Vitamin C
- ☐ B. Vitamin K
- ☐ C. Vitamin D
- ☐ D. Vitamin B12

Question ID : 75322912177

Q.17 Who won the 2021 Azerbaijan Grand Prix (Formula 1 race)?

- Ans ☐ A. Valtteri Bottas
- ☒ B. Sergio Perez
- ☐ C. Sebastian Vettel
- ☐ D. Pierre Gasly

Question ID : 75322912189

Q.18 What is the currency in Germany?

- Ans ☐ A. Ruble
- ☐ B. Leu
- ☐ C. Yen
- ☒ D. Euro

Question ID : 75322912178

Q.19 Who won the International Booker Prize 2021?

- Ans ☒ A. David Diop
- ☐ B. Marieke Lucas Rijneveld
- ☐ C. Olga Tokarczuk
- ☐ D. Marilyn Louise Booth

Question ID : 75322912184

Q.20 Chittaranjan Das was the _____ of Subhash Chandra Bose.

- Ans ☒ A. Close friend
☒ B. Political Mentor/guru
☒ C. Elder brother
☒ D. Spiritual guru

Question ID : 75322912181

Section : Arithmetic Ability

Q.1 The remainder when $1 + 3 + 5 + 7 + 9 + \dots + 99$ is divided by 8 is _____.

- Ans ☒ A. 1
☒ B. 6
☒ C. 4
☒ D. 7

Question ID : 75322912194

Q.2 Amit bought a plot at Rs. 750,000. If its value appreciates at the rate of 10% per annum, find the value of the plot after 2 years.

- Ans ☒ A. Rs.908500
☒ B. Rs.907500
☒ C. Rs.907000
☒ D. Rs.908000

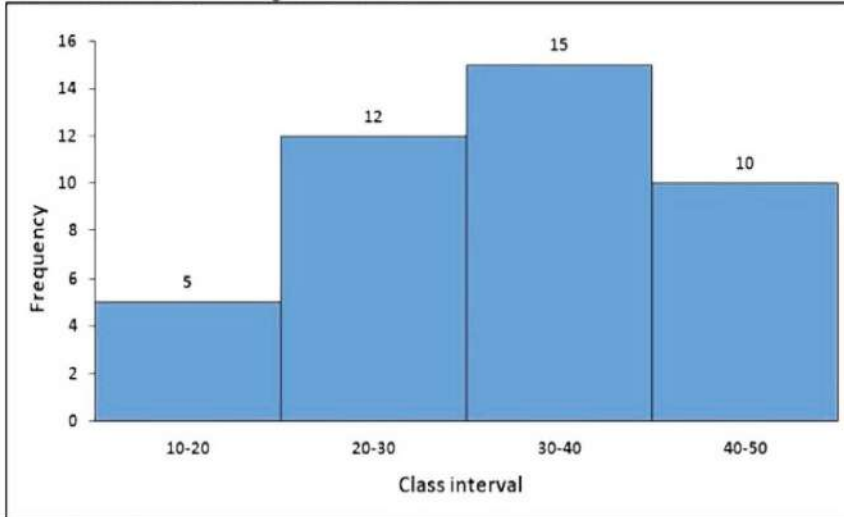
Question ID : 75322912202

Q.3 Which of the following numbers is divisible by 4?

- Ans ☒ A. 3074
☒ B. 3088
☒ C. 3042
☒ D. 3082

Question ID : 75322912191

Q.4 Find the mean of the data given as shown below.



Ans ☒ A. 32.14

☐ B. 32

☐ C. 33

☐ D. 33.14

Question ID : 75322912210

Q.5 A mobile phone cover of Rs. 150 is available at a discount of 10%. Find out how many can be bought for Rs. 675.

Ans ☐ A. 3

☐ B. 4

☐ C. 6

☒ D. 5

Question ID : 75322912196

Q.6 $[5(8^{1/3} + 27^{1/3})]^{1/2} = \underline{\hspace{2cm}}$

Ans ☐ A. 7

☐ B. 6

☐ C. 3

☒ D. 5

Question ID : 75322912192

Q.7 A man has to cover a distance of 16.5 km in 128 minutes. He decided to cover one thirds of the distance at 8 kmph and the remaining at some different speed. Find the speed after the one third distance has been covered.

Ans ☐ A. 6 kmph

☐ B. 6.5 kmph

☐ C. 7 kmph

☒ D. 7.6 kmph

Question ID : 75322912204

Q.8 The table represents the the total cost (in Rs. Crores) of an EdTech company from 2016-17 to 2020-21 on four of its courses A, B, C and D and total sales of the courses in same year. Which year did the company have maximum profit?

Year	A	B	C	D	Sales (In Rs.)
2016-17	60	90	60	45	800 crores
2017-18	25	65	70	45	600 crores
2018-19	80	120	80	45	900 crores
2019-20	100	75	20	45	750 crores
2020-21	70	120	120	70	950 crores

- Ans
- ☐ A. 2017-2016
 - ☐ B. 2020-21
 - ☐ C. 2019-2020
 - ☒ D. 2018-2019

Question ID : 75322912208

Q.9 The number 5 divides 'p' with a result of 'q' and a remainder of 3. The number 5 divides 'q' with a result of 3 and a remainder of 1. What is the value of p?

- Ans
- ☐ A. 93
 - ☐ B. 73
 - ☐ C. 63
 - ☒ D. 83

Question ID : 75322912193

Q.10 A can do $\frac{4}{5}$ of a certain work in 36 hours and B can do $\frac{2}{5}$ of the same work in 24 hours. In how many hours can both finish the work, working together?

- Ans
- ☐ A. 240/7 hrs
 - ☐ B. 25 hrs
 - ☐ C. 37 hrs
 - ☒ D. 180/7 hrs

Question ID : 75322912205

Q.11 Sushmita has to pay 36% of the money in her wallet to the milkman. She pays Rs 1152/- to the milkman. How much money does she have in the wallet?

- Ans
- ☐ A. Rs. 3000
 - ☐ B. Rs.2800
 - ☒ C. Rs. 3200
 - ☐ D. Rs.3400

Question ID : 75322912198

Q.12 The volumes of two spheres are in the ratio 216 : 343. The ratio of their curved surfaces is _____.

- Ans ☐ A. 6:7
☒ B. 36:49
☐ C. 49:36
☐ D. 7:6

Question ID : 75322912206

Q.13 A man sells an article X at a profit of 12%. If the cost price were 8% less and the selling price Rs. 14 less, his profit would have been 14%. Find the cost price of the article.(approx)

- Ans ☐ A. Rs. 194.63
☐ B. Rs. 205
☐ C. Rs. 206
☒ D. Rs. 196.63

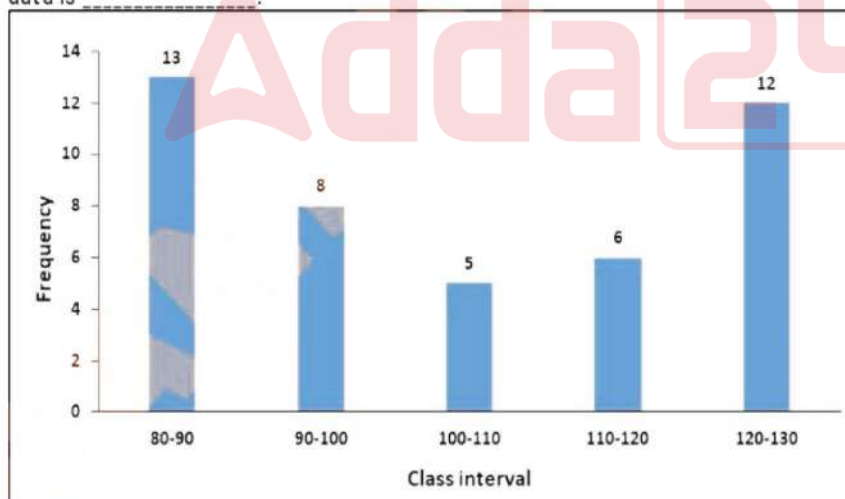
Question ID : 75322912199

Q.14 A wall of dimensions 540 cm × 600 cm × 12 cm is made with the bricks each of size 12 cm × 10 cm × 15 cm. How many bricks will be required?

- Ans ☐ A. 4720
☐ B. 1560
☐ C. 3220
☒ D. 2160

Question ID : 75322912207

Q.15 Graph of class intervals vs their frequencies are as shown. The modal class of the data is _____.



- Ans ☐ A. 90-100
☐ B. 100-110
☐ C. 110-120
☒ D. 80-90

Question ID : 75322912209

Q.16 If $P : Q = 3 : 4$ and $Q : R = 5 : 7$ then $(P + Q)^2 : (Q + R)^2$ is:

- Ans ☐ A. 2312:2581
☐ B. 2512:2304
☒ C. 1225:2304
☐ D. 1225:2204

Question ID : 75322912201

Q.17 Find x if, (Image)

$$4^{x-2} = 2^{x+1}$$

- Ans ☒ A. 5
☐ B. 4
☐ C. 2
☐ D. 3

Question ID : 75322912195

Q.18 A sum of money is to be distributed among P, Q, R, S in the proportion of 3 : 5 : 4 : 2. If Q gets Rs. 1500 more than S, what is R's share?

- Ans ☐ A. Rs.1800
☒ B. Rs.2000
☐ C. Rs.1000
☐ D. Rs.2200

Question ID : 75322912197

Q.19 The two number are in ratio 3: 5. If sum of the square of the two numbers is 7650, find the numbers?

- Ans ☐ A. 45,65
☐ B. 75,55
☒ C. 45,75
☐ D. 65,55

Question ID : 75322912200

Q.20 Excluding stoppages, the speed of a bus is 63 kmph and including stoppages, it is 54 kmph. If the bus stops for X minutes per hour, then $7X + 40$ is _____.

- Ans ☐ A. 200
☐ B. 120
☐ C. 60
☒ D. 110

Question ID : 75322912203

Q.1 Select the word that is similar in meaning (SYNONYM) to the word given below

endowment

- Ans ☒ A. dissonance
☒ B. incongruity
☒ C. impropriety
☒ D. bequest

Question ID : 75322912220

Q.2 Select the most appropriate 'one word' for the expressions given below

A secret or disguised way of writing

- Ans ☒ A. Dilettante
☒ B. Dray
☒ C. Disdain
☒ D. Cypher

Question ID : 75322912225

Q.3 Select the most appropriate meaning of the given idiom

Cry wolf

- Ans ☒ A. The final event in a series of unacceptable actions
☒ B. A competition where the outcome is difficult to judge or predict
☒ C. Make all possible efforts
☒ D. Intentionally raise a false alarm

Question ID : 75322912223

Q.4 Fill in the blank with the most appropriate choice

The sick person expresses his or her faith by calling for the elders of the church who pray over and _____ the sick with olive oil.

- Ans ☒ A. attain
☒ B. counterpoint
☒ C. disappoint
☒ D. anoint

Question ID : 75322912215

Q.5 Select the most appropriate idiom of the given meaning

A very small part of something big or whole

- Ans ☒ A. Free and easy
☒ B. Full Monty
☒ C. A drop in the bucket
☒ D. Give him the slip

Question ID : 75322912224

Q.6 The sentence below has been divided into three parts. Select the part of the sentence that has an error. If the sentence has no error, select the option 'No Error'.

The tip of the tongue is sensitive/ to salt and sweet stimulus and, the back/ of the tongue is sensitive to bitter stimulus.

- Ans ☒ A. The tip of the tongue is sensitive
☒ B. No Error
☒ C. of the tongue is sensitive to bitter stimulus.
☒ D. to salt and sweet stimulus and, the back

Question ID : 75322912211

Q.7 Select the word that is opposite in meaning (ANTONYM) to the word given below

ephemeral

- Ans ☒ A. fleeting
☒ B. fugitive
☒ C. transitory
☒ D. enduring

Question ID : 75322912219

Q.8 Four words are given, out of which only three words are spelt correctly. Choose the one spelt incorrectly.

- Ans ☒ A. unadorned
☒ B. satiate
☒ C. precarious
☒ D. excupalate

Question ID : 75322912222

Q.9 Four words are given, out of which only one word is spelt correctly. Choose the correctly spelt word.

- Ans ☒ A. debonair
☒ B. debenair
☒ C. deboniar
☒ D. debaner

Question ID : 75322912221

Q.10 Some parts of a sentence have been jumbled up, and labelled P, Q, R and S. Select the option that gives the correct sequence in which these parts can be rearranged to form a meaningful and grammatically correct sentence.

Although not intransigent,
P. Bedfordshire as the
Q. uneasy about the
R. Wash was clearly
S. specific link with
precedent to establish a principle.

Ans ☒ A. RQSP

☐ B. RPSQ

☐ C. RSPQ

☐ D. RPQS

Question ID : 75322912217

Q.11 The question below consist of a set of labelled (P, Q, R, S) sentences. Out of four options given, select the most logical order of the sentences which form a paragraph.

By contrast, the Southern economy was based principally on large farms (plantations) that produced commercial crops such as cotton and that relied on slaves as the main labour force.
P. By 1860 the per capita wealth of Southern whites was twice that of Northerners, and three-fifths of the wealthiest individuals in the country were Southerners.
Q. The price of cotton, the South's defining crop, had skyrocketed in the 1850s, and the value of slaves—who were, after all, property—rose commensurately.
R. Yet, to Southerners, as late as 1860, this appeared to be a sound business decision.
S. Rather than investing in factories or railroads as Northerners had done, Southerners invested their money in slaves—even more than in land; by 1860, 84 percent of the capital invested in manufacturing was invested in the free (nonslaveholding) states.
The extension of slavery into new territories and states had been an issue as far back as the Northwest Ordinance of 1784.

Ans ☒ A. SRQP

☐ B. PQRS

☐ C. RQPS

☐ D. SPQR

Question ID : 75322912218

Q.12 Fill in the blank with the most appropriate choice

And when the parties collude in such a _____ course, it becomes conspiracy as well.

Ans ☐ A. leaven

☒ B. craven

☐ C. graven

☐ D. shriven

Question ID : 75322912216

Q.13 Select the word segment that substitutes (replaces) the bracketed word segment correctly and completes the sentence meaningfully. Select the option 'no correction required' if the sentence is correct as given.

Property (should come with the Trades Description Act and) contracts should allow buyers to back out if they discover undeclared defects.

- Ans ☒ A. should come through the Trades Description Act and
☒ B. should come under the Trades Description Act and
☒ C. should come across the Trades Description Act and
☒ D. No correction required

Question ID : 75322912213

Q.14 Select the word segment that substitutes (replaces) the bracketed word segment correctly and completes the sentence meaningfully. Select the option 'no correction required' if the sentence is correct as given.

(The vices of the rich and great is mistaken for) error, and those of the poor and lowly, for crimes.

- Ans ☒ A. The vice of the rich and the great is mistaken for
☒ B. The vices of the rich and great are mistaken for
☒ C. The vice of the rich and great is mistaken for
☒ D. No correction required

Question ID : 75322912214

Q.15 The sentence below has been divided into three parts. Select the part of the sentence that has an error. If the sentence has no error, select the option 'No Error'.

The carving of the Mount/ Rushmore Monument likewise/ spanned a period of fourteen years.

- Ans ☒ A. No Error
☒ B. The carving of the Mount
☒ C. Rushmore Monument likewise
☒ D. spanned a period of fourteen years.

Question ID : 75322912212

Comprehension:

Read the passage carefully and choose the best answer to each question out of the four alternatives.

The Emperor Penguin is a penguin that lives in Antarctica. It is the tallest and heaviest of all penguin species. Emperor Penguins are black and white like all penguins but the sides of their neck are golden. Emperors live in the coldest climate on earth. They breed at the beginning of the Antarctic winter (March and April), on the ice all around the Antarctic continent. The shape of their body helps them to survive. They have short wings that help them dive up to 900 feet to catch larger fish. They can swim up to 12 miles per hour for a short time, which lets them escape from their main enemy, the Leopard Seal. They can stay warm because they have a thick layer of blubber. In addition, the layer of soft feathers trap air that keeps the body heat in and cold air and water out.

SubQuestion No : 16

Q.16 When does the winter period of the Antarctic continent begin?

- Ans ☐ A. September and October
- ☐ B. June and July
- ☒ C. March and April
- ☐ D. November and January

Question ID : 75322912228

Comprehension:

Read the passage carefully and choose the best answer to each question out of the four alternatives.

The Emperor Penguin is a penguin that lives in Antarctica. It is the tallest and heaviest of all penguin species. Emperor Penguins are black and white like all penguins but the sides of their neck are golden. Emperors live in the coldest climate on earth. They breed at the beginning of the Antarctic winter (March and April), on the ice all around the Antarctic continent. The shape of their body helps them to survive. They have short wings that help them dive up to 900 feet to catch larger fish. They can swim up to 12 miles per hour for a short time, which lets them escape from their main enemy, the Leopard Seal. They can stay warm because they have a thick layer of blubber. In addition, the layer of soft feathers trap air that keeps the body heat in and cold air and water out.

SubQuestion No : 17

Q.17 According to the passage, which of the following option is incorrect? Choose one option.

- Ans ☐ A. The Emperor Penguin lives in the coldest climatic conditions of Earth.
- ☐ B. The shape of an Emperor Penguin's body plays a huge role in its survival.
- ☐ C. Emperor Penguins can swim up to 12 miles per hour for a short duration of time.
- ☒ D. Emperor penguins do not share any visible similarities with other penguin species.

Question ID : 75322912230

Comprehension:

Read the passage carefully and choose the best answer to each question out of the four alternatives.

The Emperor Penguin is a penguin that lives in Antarctica. It is the tallest and heaviest of all penguin species. Emperor Penguins are black and white like all penguins but the sides of their neck are golden. Emperors live in the coldest climate on earth. They breed at the beginning of the Antarctic winter (March and April), on the ice all around the Antarctic continent. The shape of their body helps them to survive. They have short wings that help them dive up to 900 feet to catch larger fish. They can swim up to 12 miles per hour for a short time, which lets them escape from their main enemy, the Leopard Seal. They can stay warm because they have a thick layer of blubber. In addition, the layer of soft feathers trap air that keeps the body heat in and cold air and water out.

SubQuestion No : 18

Q.18 On which continent are the Emperor Penguins found?

- Ans
- ☐ A. Europe
 - ☐ B. North America
 - ☒ C. Antarctica
 - ☐ D. Arctic

Question ID : 75322912227

Comprehension:

Read the passage carefully and choose the best answer to each question out of the four alternatives.

The Emperor Penguin is a penguin that lives in Antarctica. It is the tallest and heaviest of all penguin species. Emperor Penguins are black and white like all penguins but the sides of their neck are golden. Emperors live in the coldest climate on earth. They breed at the beginning of the Antarctic winter (March and April), on the ice all around the Antarctic continent. The shape of their body helps them to survive. They have short wings that help them dive up to 900 feet to catch larger fish. They can swim up to 12 miles per hour for a short time, which lets them escape from their main enemy, the Leopard Seal. They can stay warm because they have a thick layer of blubber. In addition, the layer of soft feathers trap air that keeps the body heat in and cold air and water out.

SubQuestion No : 19

Q.19 Who is considered to be the natural predator of Emperor Penguins?

- Ans
- ☐ A. Polar Bear
 - ☐ B. Great White Shark
 - ☐ C. Killer Sharks
 - ☒ D. Leopard Seal

Question ID : 75322912229

Comprehension:

Read the passage carefully and choose the best answer to each question out of the four alternatives.

The Emperor Penguin is a penguin that lives in Antarctica. It is the tallest and heaviest of all penguin species. Emperor Penguins are black and white like all penguins but the sides of their neck are golden. Emperors live in the coldest climate on earth. They breed at the beginning of the Antarctic winter (March and April), on the ice all around the Antarctic continent. The shape of their body helps them to survive. They have short wings that help them dive up to 900 feet to catch larger fish. They can swim up to 12 miles per hour for a short time, which lets them escape from their main enemy, the Leopard Seal. They can stay warm because they have a thick layer of blubber. In addition, the layer of soft feathers trap air that keeps the body heat in and cold air and water out.

SubQuestion No : 20

Q.20 It is stated in the passage that the Emperor penguins are _____.

- Ans ☒ A. have large wings that help them dive up to 900 feet to catch larger fish
- ☒ B. the only penguin species which lives in Antarctica
- ☒ C. are disparate from all other kinds of penguins
- ☒ D. the largest of all the penguin species

Question ID : 75322912231

Section : General Hindi

Q.1 निम्न विकल्पों में से उस विकल्प का चयन कीजिए जो शुद्ध वाक्य का सही विकल्प है।

- Ans ☒ A. बिना कमाए जीवन-निर्वाह संभव नहीं।
- ☒ B. बिना जीवन-निर्वाह कमाए संभव नहीं।
- ☒ C. बे कमाए जीवन-निर्वाह संभव नहीं।
- ☒ D. नहीं कमाए जीवन-निर्वाह संभव बिना।

Question ID : 75322912242

Q.2 निम्नलिखित प्रश्न में, चार विकल्पों में से, उस विकल्प का चयन करें जो अव्यय के भेद का सही विकल्प हो।
मनुष्य पानी के बिना जीवित नहीं रह सकता है।

- Ans ☒ A. विस्मयादिबोधक अव्यय
- ☒ B. संबन्धबोधक अव्यय
- ☒ C. समुच्चयबोधक अव्यय
- ☒ D. क्रियाविशेषण अव्यय

Question ID : 75322912235

Q.3 निम्नलिखित प्रश्न में, चार विकल्पों में से, उस विकल्प का चयन करें जो दी गई मुहावरे का सही अर्थ वाला विकल्प है।
जहर उगलना -

- Ans ☒ A. चापलूसी करना
- ☒ B. बहुत कम बोलना
- ☒ C. समय नष्ट करना
- ☒ D. कड़वी बात कहना

Question ID : 75322912245

Q.4 निम्नलिखित प्रश्न में, चार विकल्पों में से, उस सही विकल्प का चयन करें जो दिए गए शब्द के सही अर्थ का उचित विकल्प हो।
अभिज्ञ

- Ans ☒ A. भूलना
☒ B. उच्च
☒ C. ज्ञाता
☒ D. अनुगमन

Question ID : 75322912236

Q.5 निम्नलिखित प्रश्न में, चार विकल्पों में से, उस विकल्प का चयन करें जो भाववाचक संज्ञा का सही विकल्प नहीं है।

- Ans ☒ A. चिकनाई
☒ B. तेजस्विता
☒ C. खरापन
☒ D. ग्राम्य

Question ID : 75322912234

Q.6 निम्नलिखित प्रश्न में, चार विकल्पों में से, उस सही विकल्प का चयन करें जो दिए गए शब्द-युग्म के सही अर्थ का उचित विकल्प हो।
बल-बल

- Ans ☒ A. ताकत-अक्षर
☒ B. ताकत-जंगल
☒ C. शक्ति-बेल
☒ D. ताकत-मेघ

Question ID : 75322912238

Q.7 निम्नलिखित प्रश्न में, चार विकल्पों में से, उस विकल्प का चयन करें जो दिए गए वाक्य के काल का सही विकल्प हो।
दीपक स्कूल से घर पहुँचने वाला होगा।

- Ans ☒ A. आसन्न भूतकाल
☒ B. हेतुहेतुमद भविष्य काल
☒ C. संदिग्ध वर्तमान काल
☒ D. तात्कालिक वर्तमान काल

Question ID : 75322912239

Q.8 निम्नलिखित प्रश्न में, चार विकल्पों में से, उस विकल्प का चयन करें जो दी गई मुहावरे का सही अर्थ वाला विकल्प है।
गर्दन पर छुरी फेरना

- Ans ☒ A. खुशियों मनाना
☒ B. लोभ में पड़ना
☒ C. दायित्व से मुक्ति पाना
☒ D. अत्याचार करना

Question ID : 75322912246

Q.9 निम्नलिखित प्रश्न में, चार विकल्पों में से, उस विकल्प का चयन करें जो सही वाक्य भेद का विकल्प हो।
जल्दी चले जाओ, नहीं तो बस चली जाएगी।

- Ans ☐ A. मिश्र वाक्य
☐ B. इच्छावाचक वाक्य
☐ C. सरल वाक्य
☒ D. संयुक्त वाक्य

Question ID : 75322912241

Q.10 निम्नलिखित प्रश्न में, चार विकल्पों में से, उस विकल्प का चयन करें जो कोष्ठक में दिए गए शब्द के अनुसार विशेषण के भेद वाला विकल्प हो।
गिलास में बहुत (कम) दूध बचा है।

- Ans ☐ A. सार्वनामिक विशेषण
☐ B. निश्चित परिमाणवाचक विशेषण
☒ C. अनिश्चित परिमाणवाचक विशेषण
☐ D. व्यक्तिवाचक विशेषण

Question ID : 75322912233

Q.11 निम्नलिखित प्रश्न में, चार विकल्पों में से, उस विकल्प का चयन करें जो विराम चिह्न युक्त वाक्य का सही विकल्प हो।

- Ans ☐ A. कामवाली रोज़ आती है, काम करती है और चली जाती है।
☐ B. कामवाली रोज़ आती है काम करती है और चली जाती है।
☒ C. कामवाली रोज़ आती है, काम करती है और चली जाती है।
☐ D. कामवाली रोज़ आती है; काम करती है और चली जाती है।

Question ID : 75322912243

Q.12 निम्नलिखित प्रश्न में, चार विकल्पों में से, उस विकल्प का चयन करें जो दिए गए वाक्य के लिए वृत्ति के भेद का सबसे अच्छा विकल्प है।
गृहकार्य करने में मेरी सहायता कीजिए।

- Ans ☐ A. संभावनार्थ
☐ B. निश्चयार्थ
☒ C. विध्यर्थ
☐ D. संदेहार्थ

Question ID : 75322912240

Q.13 निम्नलिखित प्रश्न में, चार विकल्पों में से, उस विकल्प का चयन करें जो देशज शब्द का सही विकल्प हो।

- Ans ☐ A. फीता
☐ B. उम्मीद
☒ C. डोंगा
☐ D. मजदूर

Question ID : 75322912232

Q.14 निम्नलिखित प्रश्न में, चार विकल्पों में से, उस विकल्प का चयन करें जो दिए गए लोकोक्ति का सही अर्थ वाला विकल्प है।

घर में नहीं दाने बुढ़िया चली भुनाने -

- Ans ☒ A. अज्ञान में रहना
☒ B. झूठा दिखावा करना
☒ C. बिना प्रयत्न के सफलता नहीं मिलना
☒ D. अच्छी वस्तु तो थोड़ी भी भली

Question ID : 75322912244

Q.15 निम्नलिखित प्रश्न में, चार विकल्पों में से, उस विकल्प का चयन करें जो शुद्ध शब्द का सही विकल्प है।

- Ans ☒ A. आगतुक
☒ B. आगतुक
☒ C. आगतुक
☒ D. आगतुक

Question ID : 75322912237

Comprehension:

नीचे दिए गये गद्यांश को ध्यानपूर्वक पढ़ें और चार विकल्पों में से प्रत्येक प्रश्न का सर्वोत्तम उत्तर चुनें।

आदर्श व्यक्ति कर्मशीलता में ही अपने जीवन की सफलता समझता है। जीवन का प्रत्येक क्षण वह कर्म में लगाता है। विश्राम और विनोद के लिए उसके पास निश्चित समय रहता है। शेष समय जन सेवा में व्यतीत होता है। हाथ पर हाथ धरकर बैठने को वह मृत्यु के समान समझता है। काम करने की उसमें लगन होती है। उत्साह होता है। विपत्तियों में भी वह अपने चरित्र का सच्चा परिचय देता है। धैर्य की कुदाली से वह बड़े-बड़े संकट पर्वतों को ढहा देता है। उसकी कार्यकुशलता देखकर लोग दाँतो तले ऊँगली दबाते हैं। संतोष उसका धन है। वह परिस्थितियों का दास नहीं। परिस्थितियाँ उसकी दासी हैं।

SubQuestion No : 16

Q.16 आदर्श व्यक्ति बड़े-बड़े संकटों को कैसे पार करते हैं?

- Ans ☒ A. हाथों से
☒ B. जल्दबाजी से
☒ C. धैर्य से
☒ D. कुदाली से

Question ID : 75322912250

Comprehension:

नीचे दिए गये गद्यांश को ध्यानपूर्वक पढ़ें और चार विकल्पों में से प्रत्येक प्रश्न का सर्वोत्तम उत्तर चुनें।

आदर्श व्यक्ति कर्मशीलता में ही अपने जीवन की सफलता समझता है। जीवन का प्रत्येक क्षण वह कर्म में लगाता है। विश्राम और विनोद के लिए उसके पास निश्चित समय रहता है। शेष समय जन सेवा में व्यतीत होता है। हाथ पर हाथ धरकर बैठने को वह मृत्यु के समान समझता है। काम करने की उसमें लगन होती है। उत्साह होता है। विपत्तियों में भी वह अपने चरित्र का सच्चा परिचय देता है। धैर्य की कुदाली से वह बड़े-बड़े संकट पर्वतों को ढहा देता है। उसकी कार्यकुशलता देखकर लोग दाँतो तले ऊँगली दबाते हैं। संतोष उसका धन है। वह परिस्थितियों का दास नहीं। परिस्थितियाँ उसकी दासी हैं।

SubQuestion No : 17

Q.17 आदर्श व्यक्ति अपना बचा हुआ समय किसमें बिताते हैं?

- Ans ☒ A. कार्य करने में
☒ B. लोगों की सेवा में
☒ C. आराम करने में
☒ D. स्वयं सेवा में

Question ID : 75322912249

Comprehension:

नीचे दिए गये गद्यांश को ध्यानपूर्वक पढ़ें और चार विकल्पों में से प्रत्येक प्रश्न का सर्वोत्तम उत्तर चुनें।

आदर्श व्यक्ति कर्मशीलता में ही अपने जीवन की सफलता समझता है। जीवन का प्रत्येक क्षण वह कर्म में लगाता है। विश्राम और विनोद के लिए उसके पास निश्चित समय रहता है। शेष समय जन सेवा में व्यतीत होता है। हाथ पर हाथ धरकर बैठने को वह मृत्यु के समान समझता है। काम करने की उसमें लगन होती है। उत्साह होता है। विपत्तियों में भी वह अपने चरित्र का सच्चा परिचय देता है। धैर्य की कुदाली से वह बड़े-बड़े संकट पर्वतों को ढहा देता है। उसकी कार्यकुशलता देखकर लोग दाँतो तले ऊँगली दबाते हैं। संतोष उसका धन है। वह परिस्थितियों का दास नहीं। परिस्थितियाँ उसकी दासी हैं।

SubQuestion No : 18

Q.18 इनमें से कौन-सा संतोष का समानार्थी शब्द नहीं है?

- Ans ☒ A. संतुष्टि
☒ B. तसल्ली
☒ C. धीरज
☒ D. दृढ़ता

Question ID : 75322912251

Comprehension:

नीचे दिए गये गद्यांश को ध्यानपूर्वक पढ़ें और चार विकल्पों में से प्रत्येक प्रश्न का सर्वोत्तम उत्तर चुनें।

आदर्श व्यक्ति कर्मशीलता में ही अपने जीवन की सफलता समझता है। जीवन का प्रत्येक क्षण वह कर्म में लगाता है। विश्राम और विनोद के लिए उसके पास निश्चित समय रहता है। शेष समय जन सेवा में व्यतीत होता है। हाथ पर हाथ धरकर बैठने को वह मृत्यु के समान समझता है। काम करने की उसमें लगन होती है। उत्साह होता है। विपत्तियों में भी वह अपने चरित्र का सच्चा परिचय देता है। धैर्य की कुदाली से वह बड़े-बड़े संकट पर्वतों को ढहा देता है। उसकी कार्यकुशलता देखकर लोग दाँतो तले ऊँगली दबाते हैं। संतोष उसका धन है। वह परिस्थितियों का दास नहीं। परिस्थितियाँ उसकी दासी हैं।

SubQuestion No : 19

Q.19 अनुच्छेद के अनुसार आदर्श व्यक्ति किसमें अपने जीवन की सफलता समझता है?

- Ans ☒ A. ठहराव
☒ B. कर्मशीलता
☒ C. सहनशीलता
☒ D. संबंध

Question ID : 75322912248

Comprehension:

नीचे दिए गये गद्यांश को ध्यानपूर्वक पढ़ें और चार विकल्पों में से प्रत्येक प्रश्न का सर्वोत्तम उत्तर चुनें।

आदर्श व्यक्ति कर्मशीलता में ही अपने जीवन की सफलता समझता है। जीवन का प्रत्येक क्षण वह कर्म में लगाता है। विश्राम और विनोद के लिए उसके पास निश्चित समय रहता है। शेष समय जन सेवा में व्यतीत होता है। हाथ पर हाथ धरकर बैठने को वह मृत्यु के समान समझता है। काम करने की उसमें लगन होती है। उत्साह होता है। विपत्तियों में भी वह अपने चरित्र का सच्चा परिचय देता है। धैर्य की कुदाली से वह बड़े-बड़े संकट पर्वतों को ढहा देता है। उसकी कार्यकुशलता देखकर लोग दाँतो तले ऊँगली दबाते हैं। संतोष उसका धन है। वह परिस्थितियों का दास नहीं। परिस्थितियाँ उसकी दासी हैं।

SubQuestion No : 20

Q.20 इस अनुच्छेद का कोई उपयुक्त शीर्षक-

- Ans ☒ A. उत्साही व्यक्ति
☒ B. विश्राम और विनोद
☒ C. कार्यकुशलता
☒ D. आदर्श व्यक्ति

Question ID : 75322912252

Section : Discipline1

Q.1 What is the time period of the foetus? (Choose the closest answer.)

- Ans ☐ A. 1 to 2 weeks
☒ B. 9 week till birth
☐ C. 0 to 8 weeks
☐ D. 12 to 24 weeks

Question ID : 75322912259

Q.2 When a child is able to order items along a quantitative dimension. This ability is called:

- Ans ☐ A. Reasoning
☐ B. Spatial Reasoning
☐ C. Mapping
☒ D. Seriation

Question ID : 75322912265

Q.3 Which among these can affect the child negatively in the early age?

- Ans ☒ A. Divorce
☐ B. Effective coparenting
☐ C. Authoritative parenting
☐ D. Adequate involvement

Question ID : 75322912271

Q.4 What is the time period of the third trimester of pregnancy?

- Ans ☐ A. 21-28 weeks
☐ B. 41 - 45 weeks
☒ C. 29-40 weeks
☐ D. 9-18 weeks

Question ID : 75322912260

Q.5 For educational purposes, learners with hearing impairment are classified into 4 categories. Which among the following have the hearing loss range of 71- 90 db?

- Ans ☐ A. Profound hearing loss
☒ B. Severe hearing loss
☐ C. Moderate hearing loss
☐ D. Mild hearing loss

Question ID : 75322912269

Q.6 Who among the following gave the theory of attachment?

- Ans ☒ A. Skinner
- ☒ B. John Bowlby
- ☒ C. Vygotsky
- ☒ D. Howard Gardner

Question ID : 75322912255

Q.7 Which one of the following is the factor affecting physical growth in a child?

- Ans ☒ A. Heredity
- ☒ B. Teacher
- ☒ C. Religious places
- ☒ D. Peers

Question ID : 75322912256

Q.8 ADHD refers to:

- Ans ☒ A. Attention-deficit hyperactivity disorder
- ☒ B. Attentive-deficiency hyperactivity disorder
- ☒ C. Attention-deficient hyperactive disorder
- ☒ D. Attention-deficiency hyperactive disorder

Question ID : 75322912261

Q.9 When a neutral stimulus is paired with a stimulus it leads to a reflexive response. This type of learning is called:

- Ans ☒ A. Operant conditioning
- ☒ B. Reinforcement
- ☒ C. Extinction
- ☒ D. Classical conditioning

Question ID : 75322912263

Q.10 According to Piaget's cognitive theory, what is the second stage of development?

- Ans ☒ A. Formal operational
- ☒ B. Concrete operational
- ☒ C. Pre-operational
- ☒ D. Sensory Motor

Question ID : 75322912254

Q.11 Which among them is the symptom of ADHD?

- Ans ☒ A. Fatigue
- ☒ B. Low mood
- ☒ C. Inattention
- ☒ D. Anxiety

Question ID : 75322912266

Q.12 Which of the following is the part of the Mesosystem?

- Ans ☒ A. Workplace
☒ B. School
☒ C. Values
☒ D. Immediate Family

Question ID : 75322912257

Q.13 In which stage the ability of "conservation" starts developing in a child?

- Ans ☒ A. Sensory Motor
☒ B. Concrete operational
☒ C. Formal operational
☒ D. Pre-operational

Question ID : 75322912262

Q.14 A child's active efforts to construct literacy knowledge through informal experiences are called:

- Ans ☒ A. Phonics development
☒ B. Emerging language
☒ C. Emergent Literacy
☒ D. Language development

Question ID : 75322912264

Q.15 What are the main cognitive learning styles?

- Ans ☒ A. Visual, auditory and kinesthetic
☒ B. Audio, Visual, Manuscript
☒ C. Visual and Kinesthetic
☒ D. Auditory and Visual

Question ID : 75322912268

Q.16 Which of the following is not the part of authoritative child-rearing style?

- Ans ☒ A. High acceptance
☒ B. Low acceptance
☒ C. Involvement
☒ D. Adaptive control

Question ID : 75322912270

Q.17 How many stages did Kohlberg propose in his theory of moral development?

- Ans ☒ A. 4
☒ B. 6
☒ C. 5
☒ D. 8

Question ID : 75322912253

Q.18 Which of these is not the factor that affects learning?

- Ans ☒ A. Language
☒ B. Name of a child
☒ C. School
☒ D. Family

Question ID : 75322912267

Q.19 Kohlberg's theory is related to which domain?

- Ans ☒ A. Intelligence
☒ B. Cognitive
☒ C. Physical
☒ D. Moral

Question ID : 75322912258

Q.20 Which among them is not the factor of child maltreatment?

- Ans ☒ A. Parents
☒ B. Caregiver
☒ C. Books
☒ D. Society

Question ID : 75322912272

Section : Discipline2

Q.1 Which of the following include "inclusive education"?

- Ans ☒ A. AEP
☒ B. IEDC
☒ C. SSA
☒ D. BBBP

Question ID : 75322912280

Q.2 What is the full form of SSA?

- Ans ☒ A. Sarva Shiksha Abhiyan
☒ B. Sarva Shiksha Agenda
☒ C. Sarva Shikshit Abhiyaan
☒ D. Saarva Shikshit Agenda

Question ID : 75322912276

Q.3 There are _____ basis of any curriculum.

- Ans ☒ A. 6
- ☒ B. 4
- ☒ C. 5
- ☒ D. 2

Question ID : 75322912289

Q.4 When was IEDC initiated ?

- Ans ☒ A. 1970
- ☒ B. 1974
- ☒ C. 1973
- ☒ D. 1960

Question ID : 75322912283

Q.5 Who categorised the curriculum in four aspects like a product, a programme, a intended learning outcomes, a planned learner experiences.

- Ans ☒ A. Dewey
- ☒ B. Brown D.F.
- ☒ C. Tanner
- ☒ D. Beane et. al.

Question ID : 75322912290

Q.6 Who among them has talked about "four pillars of education" in his/her report?

- Ans ☒ A. Rousseau
- ☒ B. Delor
- ☒ C. Gandhi
- ☒ D. Montessori

Question ID : 75322912278

Q.7 Which one of the following is the biological term?

- Ans ☒ A. Masculinity
- ☒ B. Patriarchy
- ☒ C. Feminine
- ☒ D. Sex

Question ID : 75322912282

Q.8 Why it is difficult to implement inclusive education?

- Ans ☒ A. No, we can easily implement them
- ☒ B. No tested methods
- ☒ C. Unavailability of teaching aids
- ☒ D. No tested methods and Unavailability of teaching aids

Question ID : 75322912285

Q.9 Curriculum design does not consist of _____?

- Ans ☐ A. Subject matter
☐ B. Objective
☒ C. Teacher
☐ D. Evaluation

Question ID : 75322912287

Q.10 Feminism is about:

- Ans ☐ A. Freedom
☐ B. Education for women
☐ C. Women
☒ D. Equal rights for all

Question ID : 75322912281

Q.11 Which of the following programme has the objective of "Universal retention by 2010"?

- Ans ☒ A. SSA
☐ B. RUSA
☐ C. IEDC
☐ D. RMSA

Question ID : 75322912279

Q.12 What does inclusive education mean?

- Ans ☐ A. Including parents
☒ B. Including disabled
☐ C. Including nature
☐ D. Including technology

Question ID : 75322912284

Q.13 Which is considered to be the best child-rearing style?

- Ans ☐ A. Permissive
☐ B. Authoritarian
☒ C. Authoritative
☐ D. Uninvolved

Question ID : 75322912274

Q.14 Which one of the following is not the feature of inclusive education?

- Ans ☐ A. Accepting diversity as normal
☐ B. Solving aptitude
☐ C. Making it flexible
☒ D. Rote memorisation

Question ID : 75322912286

Q.15 According to Tyler's model, the last phase in curriculum design is _____?

- Ans ☐ A. Reflection
☐ B. Society
☐ C. Experiences
☒ D. Evaluation

Question ID : 75322912291

Q.16 What does article 45 refer to:

- Ans ☐ A. Mid-day meals
☐ B. Teacher trainee
☐ C. Teaching learning process
☒ D. Education for all

Question ID : 75322912277

Q.17 Which among them is the cause of regional diversity?

- Ans ☐ A. Family
☐ B. Language
☒ C. Historical causes
☐ D. Media

Question ID : 75322912275

Q.18 Which one of the following is not the consequence of sexual abuse?

- Ans ☒ A. Confidence
☐ B. Anxiety
☐ C. Anger
☐ D. Depression

Question ID : 75322912273

Q.19 Who described the curriculum as "a systematic group of courses and sequences required for graduation in a major field of study"?

- Ans ☐ A. Wiles
☒ B. Carter V. Good
☐ C. Bondi
☐ D. Tanner

Question ID : 75322912288

Q.20 What is the hidden curriculum?

- Ans ☐ A. It includes child's experiences
☐ B. A chapter in a textbook
☐ C. Curriculum that is not taught
☒ D. Curriculum that is not taught and it includes child's experiences

Question ID : 75322912292

Section : Discipline3

Q.1 Which of the following is supported by Broca's frontal lobe?

- Ans ☐ A. Language production
- ☐ B. Grammatical processing
- ☐ C. Word meaning
- ☒ D. Language production and Grammatical processing

Question ID : 75322912309

Q.2 How can we assess students through ICT?

- Ans ☒ A. Electronic gadgets and Synchronous online meetings
- ☐ B. Electronic gadgets
- ☐ C. Attendance
- ☐ D. Synchronous online meetings

Question ID : 75322912296

Q.3 LAD refers to:

- Ans ☐ A. Language acquisition disease
- ☐ B. Language acquire device
- ☒ C. Language acquisition device
- ☐ D. Language acquisition delay

Question ID : 75322912307

Q.4 The sensitive period for language development is:

- Ans ☐ A. Only age 10-15
- ☐ B. Adolescence
- ☒ C. Childhood
- ☐ D. Adult

Question ID : 75322912308

Q.5 The Inductive approach is suitable in which situation?

- Ans ☐ A. Introduction of new topic
- ☐ B. Models
- ☐ C. Derivation of formulas
- ☒ D. Derivation of formulas and Introduction of new topic

Question ID : 75322912310

Q.6 Which of the following is not the effective technique for transacting mathematics curriculum in a classroom?

- Ans
- ☐ A. Assignments
 - ☐ B. Play way
 - ☐ C. Drill and practice
 - ☒ D. Solving questions roll no. wise on blackboard

Question ID : 75322912311

Q.7 Assessment for learning comprises of how many phases?

- Ans
- ☐ A. 4
 - ☐ B. 5
 - ☒ C. 2
 - ☐ D. 3

Question ID : 75322912299

Q.8 Which of the following is not the category of assistive technology?

- Ans
- ☐ A. Academic Learning Aids
 - ☒ B. Books
 - ☐ C. Augmentative Communication
 - ☐ D. Computer Access and Instruction

Question ID : 75322912298

Q.9 Comprehension of a heard discourse includes two kinds of processes. Those are:

- Ans
- ☒ A. Top-down and bottom-up
 - ☐ B. Down-top and up-bottom
 - ☐ C. Reading and listening
 - ☐ D. Coding and decoding

Question ID : 75322912303

Q.10 Which one of the following enhances listening?

- Ans
- ☒ A. Interest
 - ☐ B. Discomfort
 - ☐ C. Fatigue
 - ☐ D. Boredom

Question ID : 75322912304

Q.11 Which of these is not used as the ICT tool for communication between parent and teacher?

- Ans ☒ A. Postal letters
☒ B. Blogs
☒ C. Phone message
☒ D. Websites

Question ID : 75322912293

Q.12 If we consider that there are six stages in children's first language acquisition. What is the time period of "one-word stage"? (Choose the closest answer.)

- Ans ☒ A. 4-8 months
☒ B. 9-18 months
☒ C. 19-22 months
☒ D. 22-30 months

Question ID : 75322912301

Q.13 What among them is/are the advantages of Enterprise Resource Planning (ERP)?

- Ans ☒ A. Security of data
☒ B. Security of data and Supports pedagogy
☒ C. Not very friendly
☒ D. Supports pedagogy

Question ID : 75322912295

Q.14 Which of the following is not included in the decoding process?

- Ans ☒ A. Syllable level
☒ B. Intonation level
☒ C. Writing level
☒ D. Phoneme level

Question ID : 75322912305

Q.15 Which of the following is not the approach of assessment for learning?

- Ans ☒ A. Only assignments
☒ B. Teacher-led assessment
☒ C. Computer-based assessment
☒ D. Peer assessment

Question ID : 75322912300

Q.16 Which one of the following is not the component of language ?

- Ans ☒ A. Pragmatics
☒ B. Gross motor skills
☒ C. Phonics
☒ D. Syntax

Question ID : 75322912306

Q.17 Which among them is not the major area of educational management ?

- Ans ☒ A. Parent-related
☒ B. Teacher-related
☒ C. School functioning
☒ D. Learner-related

Question ID : 75322912294

Q.18 What is the full form of ICT?

- Ans ☒ A. Information and communication technology
☒ B. Intense communication and technology
☒ C. Internet communication and transition
☒ D. Information and communication through technology

Question ID : 75322912297

Q.19 New words which are formed from the initial letters of a set of other words are called as _____.

- Ans ☒ A. Acronyms
☒ B. Infixes
☒ C. Conversion
☒ D. Suffixes

Question ID : 75322912302

Q.20 Which among them is not the strategy to teach mathematics?

- Ans ☒ A. Discovering
☒ B. Inductive-Deductive
☒ C. Analysis-synthesis
☒ D. Textbook questions solving

Question ID : 75322912312

Q.7 Which of the following is not the scope of art education?

- Ans ☒ A. Rote memorisation
☐ B. Holistic knowledge
☐ C. Academic achievement
☐ D. Personal development

Question ID : 75322912323

Q.8 Which civilization among them used to practice yoga?

- Ans ☒ A. Indus valley civilization
☐ B. Roman civilization
☐ C. Maya civilization
☐ D. Egyptian civilization

Question ID : 75322912329

Q.9 What is the first step of an action research in social science?

- Ans ☐ A. Planning for intervention
☐ B. Analyze the problem
☐ C. Proposition
☒ D. Developing a focus

Question ID : 75322912321

Q.10 Deductive approach is _____?

- Ans ☐ A. Parent centered
☐ B. Teacher and parent centered
☐ C. child centered
☒ D. Teacher centered

Question ID : 75322912314

Q.11 How many organs are there in Ghaṭastha Yoga?

- Ans ☒ A. 7
☐ B. 8
☐ C. 6
☐ D. 5

Question ID : 75322912327

Q.12 Which is not the characteristic of a good assignment?

- Ans ☐ A. Task is defined
☐ B. Have corelation with previous knowledge
☐ C. Objective is clear
☒ D. Specific steps and books are given

Question ID : 75322912313

Q.13 Which of the following is not included in broad themes in EVS?

- Ans ☒ A. Air
☐ B. Food
☐ C. Travel
☐ D. Water

Question ID : 75322912317

Q.14 How many types of parent's internal working models are in attachment theory?

- Ans ☒ A. 4
☐ B. 5
☐ C. 2
☐ D. 6

Question ID : 75322912332

Q.15 Yoga is not associated with:

- Ans ☐ A. Mind
☐ B. Stability
☐ C. Fitness
☒ D. Religion

Question ID : 75322912328

Q.16 Which is not the principle of cooperative learning?

- Ans ☐ A. Individual accountability
☒ B. Observing environment
☐ C. Equal Status Interactions
☐ D. Positive interdependence

Question ID : 75322912319

Q.17 Which of the following is the 4th step in activity-based learning?

- Ans ☐ A. Reflecting
☐ B. Planning
☐ C. Conducting activity
☒ D. Revising

Question ID : 75322912318

Q.18 What is the 4th step in developing a unit plan?

- Ans ☐ A. Evaluation
☒ B. Planning about interaction
☐ C. Objectives
☐ D. Division of unit

Question ID : 75322912316

Q.19 Which one of the following can not be listed under observatory activity?

- Ans ☒ A. Watching video of pot making
- ☒ B. Walking in a fort
- ☒ C. Looking at pictures of some content first time
- ☒ D. Writing one article

Question ID : 75322912324

Q.20 Which is not the process of cognition in science learning?

- Ans ☒ A. Remembering
- ☒ B. Reading text
- ☒ C. Understanding
- ☒ D. Applying

Question ID : 75322912315

Section : Discipline5

Q.1 Which one of the following does not come under a healthful school physical environment ?

- Ans ☒ A. Toilets
- ☒ B. Drinking water
- ☒ C. Books
- ☒ D. Comfortable seats

Question ID : 75322912337

Q.2 Factors like language and verbal reasoning, executive function, make-believe play contributes to:

- Ans ☒ A. Children's theory of mind
- ☒ B. Moral development
- ☒ C. Cognitive development
- ☒ D. Language development

Question ID : 75322912348

Q.3 What is the full form of SMC?

- Ans ☒ A. School management committees
- ☒ B. Society maintained committee
- ☒ C. Social modified committee
- ☒ D. School management company

Question ID : 75322912352

Q.4 How many themes are there for the good citizenship?

- Ans ☒ A. 3
☒ B. 4
☒ C. 6
☒ D. 5

Question ID : 75322912342

Q.5 Who proposed the goodness-of-fit model ?

- Ans ☒ A. Thomas and chess
☒ B. David and murphy
☒ C. calkins
☒ D. Zhou, lengua and wang

Question ID : 75322912334

Q.6 Guilt, shame, envy, pride, embarrassment . These emotions are _____.

- Ans ☒ A. sad emotions
☒ B. depressing thoughts
☒ C. Anger
☒ D. self-conscious emotions

Question ID : 75322912335

Q.7 How many Identity statuses are there?

- Ans ☒ A. 4
☒ B. 2
☒ C. 5
☒ D. 6

Question ID : 75322912349

Q.8 Which among them is not the nutrient ?

- Ans ☒ A. Mineral salt
☒ B. Water
☒ C. Roughage
☒ D. Iron

Question ID : 75322912338

Q.9 Which one of them is not a communicable disease ?

- Ans ☒ A. Chicken pox
☒ B. Tuberculosis
☒ C. Diabetes
☒ D. Whooping cough

Question ID : 75322912340

Q.10 In which of the following attachment do infants use the parent as a secure base?

- Ans ☒ A. Disoriented attachment
☒ B. Avoidant attachment
☒ C. Secure attachment
☒ D. Resistant attachment

Question ID : 75322912336

Q.11 Factors that affect the process of group formation are-

- Ans ☒ A. Availability of space and Availability of time
☒ B. None
☒ C. Availability of time
☒ D. Availability of space

Question ID : 75322912345

Q.12 Which one of the following is a characteristic of autism?

- Ans ☒ A. Oversleeping
☒ B. Absorbed in the self
☒ C. Can not read
☒ D. Scaffolding

Question ID : 75322912350

Q.13 Activities like making mats, masks, holders, clay toys, etc are related to:

- Ans ☒ A. Fulfillment of basic needs
☒ B. Environmental awareness
☒ C. Beautification of environment
☒ D. Community service

Question ID : 75322912346

Q.14 "Social smile" appears between _____. (Choose the closest answer.)

- Ans ☒ A. 10 and 12 weeks
☒ B. 8 and 10 weeks
☒ C. 6 and 12 weeks
☒ D. 6 and 10 weeks

Question ID : 75322912333

Q.15 Which is not the factor for the success of work education?

- Ans ☒ A. Broadmindedness
☒ B. High academic marks
☒ C. Feelings of co-operation
☒ D. Imaginative and creative aptitude

Question ID : 75322912344

Q.16 How many work experience-based methods are there?

- Ans
- ☐ A. 3
 - ☐ B. 4
 - ☐ C. 6
 - ☒ D. 5

Question ID : 75322912343

Q.17 Factors that do not affect diet is:

- Ans
- ☐ A. Body size
 - ☐ B. Eating habits
 - ☐ C. Age
 - ☒ D. Media

Question ID : 75322912339

Q.18 What should we not do during a fracture?

- Ans
- ☐ A. Place splint
 - ☐ B. Go to hospital
 - ☐ C. Apply ice pack
 - ☒ D. Mobilize injured area

Question ID : 75322912341

Q.19 An activity like participating in cleanliness drive comes under-

- Ans
- ☐ A. Environmental awareness
 - ☐ B. cultural legacy
 - ☒ C. Community service
 - ☐ D. Fulfillment of basic needs

Question ID : 75322912347

Q.20 How much percentage of parents is included in SMC?

- Ans
- ☐ A. 50%
 - ☒ B. 75%
 - ☐ C. 80%
 - ☐ D. 25%

Question ID : 75322912351