

**DSSSB**

**Previous Year Paper**

**Asst Superintendent**

**16 Jun, 2019 Shift 2**

Adda247

# Test Prime

**ALL EXAMS, ONE SUBSCRIPTION**



**80,000+**  
Mock Tests



**Personalised  
Report Card**



**Unlimited  
Re-Attempt**



**600+**  
Exam Covered



**20,000+** Previous  
Year Papers



**500%**  
Refund



**ATTEMPT FREE MOCK NOW**

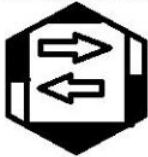


GOVT. OF NCT OF DELHI  
Delhi Subordinate Services Selection Board  
FC-18, Institutional Area, Karkardooma, Delhi – 110092.  
[www.dsssb.delhigovt.nic.in](http://www.dsssb.delhigovt.nic.in)

Participant ID	
Participant Name	
Test Center Name	
Test Date	16/06/2019
Test Time	12:30 PM - 2:30 PM
Subject	ASSISTANT SUPERINTENDENT

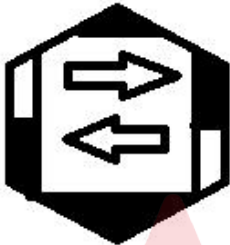
Section : Mental Ability1

Q.1 Identify the correct mirror image of the given figure when the mirror is placed to the right of the figure.



Ans

✗ 1.



✓ 2.



✗ 3.



✗ 4.



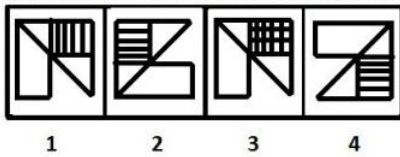
Question ID : 497959416

Q.2 Five buses for five different cities Agra, Kanpur, Lucknow, Meerut and Varanasi depart from five bus terminals T-1 to T-5 but not necessarily in the same order. The Lucknow bus departs from T-2. The Varanasi bus does not depart from T-1 or T-4. The Meerut bus goes either from T-1 or T-5. The Agra bus does not leave from T-3 or T-1. The Kanpur bus leaves from T-4. From which terminal does the bus for Agra leave?

- Ans
- ☒ 1. T-3 or T-5
  - ☒ 2. T-3
  - ☒ 3. T-1
  - ☒ 4. T-5

Question ID : 497959424

Q.3 Four figures marked 1, 2, 3 and 4 are given below. Three of the given figures are similar in a certain manner while one figure is not like the other four. Choose the figure which is different from the other figures.



- Ans
- ☒ 1. 3
  - ☒ 2. 1
  - ☒ 3. 4
  - ☒ 4. 2

Question ID : 497959413

Q.4 Identify the correct water image of the combination given below.

MAINSTREAM

- Ans
- ☒ 1. MAERTSIAM
  - ☒ 2. MAINSTREIAM
  - ☒ 3. MAERTSIAM
  - ☒ 4. IAMIIMARTS

Question ID : 497959417

Q.5 उस शब्द का चयन करें जो तीसरे शब्द से उसी तरह संबंधित है जैसे दूसरा शब्द पहले शब्द से संबंधित है।

अदालत : निर्णय :: कक्षा : ?

- Ans
- ☒ 1. शिक्षा
  - ☒ 2. कॉलेज
  - ☒ 3. विद्यालय
  - ☒ 4. शिक्षक

Question ID : 497959407

Q.6 Pick the odd one out.

- Ans
- ☒ 1. Cuba
  - ☒ 2. Oslo
  - ☒ 3. Kyat
  - ☒ 4. Fiji

Question ID : 497959410

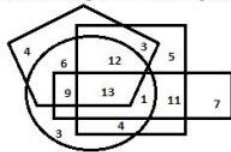
Q.7 Select the term that is related to the third term in the same way as the second term is related to the first term.

BDF : 48 :: FHJ : ?

- Ans
- ☒ 1. 90
  - ☒ 2. 180
  - ☒ 3. 240
  - ☒ 4. 480

Question ID : 497959406

Q.8 In the Venn diagram given below, the square represents 'boys', the circle represents 'tall persons', the pentagon represents 'North Indians' and the rectangle represents 'food lovers'. The numbers given in the diagram represents the number of persons of that particular category.



How many North Indian boys are tall persons but are NOT food lovers?

- Ans
- ☒ 1. 12
  - ☒ 2. 13
  - ☒ 3. 16
  - ☒ 4. 25

Question ID : 497959420

Q.9 Vilas starts walking from his home and walks 30 m towards south; from there he turns left and walks 40 m. After that, he turns right and walks 45 m. Then, he turns left and walks 30 m. Then, he turns left and walks 50 m. Then, he finally turns left and walks 70 m. How far is he now from his home and in which direction with reference to his home?

- Ans
- ☒ 1. 25 m, North
  - ☒ 2. 25 m, South
  - ☒ 3. 5 m, North
  - ☒ 4. 5 m, South

Question ID : 497959421

Q.10 Select the number that is related to the third number in the same way as the second number is related to the first number.

8 : 128 :: 10 : ?

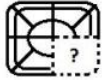
- Ans
- ☒ 1. 200



- ☒ 2. 128
- ☒ 3. 228
- ☒ 4. 100

Question ID : 497959408

Q.11 Which of the following option figures will replace the question mark (?) in the figure given below to complete the pattern of the figure?



Ans

- ☒ 1.
- ☒ 2.
- ☒ 3.
- ☒ 4.

Question ID : 497959419

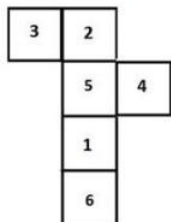
Q.12 Six friends Gopal, Sheela, Reena, Senthil, Hina and Gaurav are standing in a row. There are two persons between Sheela and Hina. Reena is between Hina and Senthil. Only one person is standing before Gopal. Gaurav is between Gopal and Hina, who is third from the back end of the row. Which two persons are standing between Sheela and Hina?

Ans

- ☒ 1. Gaurav and Senthil
- ☒ 2. Senthil and Reena
- ☒ 3. Gopal and Reena
- ☒ 4. Gopal and Gaurav

Question ID : 497959423

Q.13 If the following figure is folded to form a cube, which number will appear on the face opposite the number '6'?



Ans

- ☒ 1. 2
- ☒ 2. 4
- ☒ 3. 3
- ☒ 4. 5

Question ID : 497959414

Q.14

Select the letter cluster that is related to the third letter cluster in the same way as the second letter cluster is related to the first letter cluster.

DFH : WUS :: KMO : ?

- Ans
- ☒ 1. PNO
  - ☒ 2. HJL
  - ☒ 3. WUT
  - ☒ 4. PNL

Question ID : 497959405

Q.15 At the time of sunrise, Lokesh is sitting facing a pole. If the shadow of the pole falls to his right, then which direction is Lokesh facing?

- Ans
- ☒ 1. South
  - ☒ 2. West
  - ☒ 3. North
  - ☒ 4. East

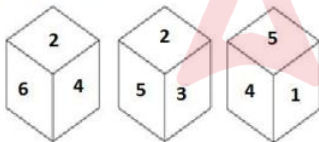
Question ID : 497959422

Q.16 Pick the number that is different than the rest.

- Ans
- ☒ 1. 29
  - ☒ 2. 31
  - ☒ 3. 37
  - ☒ 4. 33

Question ID : 497959412

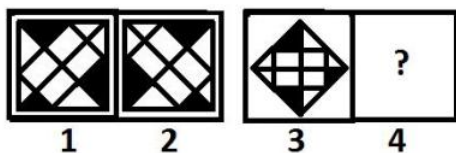
Q.17 Three different positions of the same dice are shown below. Which number is on the face opposite to the face showing the number 3?



- Ans
- ☒ 1. 5
  - ☒ 2. 4
  - ☒ 3. 1
  - ☒ 4. 2

Question ID : 497959415

Q.18 Select the figure that is related to the third figure in the same way as the second figure is related to the first figure.



Ans

- ✗ 1.
- ✗ 2.
- ✗ 3.
- ✓ 4.

Question ID : 497959409

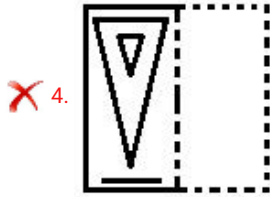
Q.19 Given here is a piece of transparent paper with some patterns on it. How will the sheet appear when it is folded along the dotted line?



Ans

- ✗ 1.
- ✓ 2.
- ✗ 3.





Question ID : 497959418

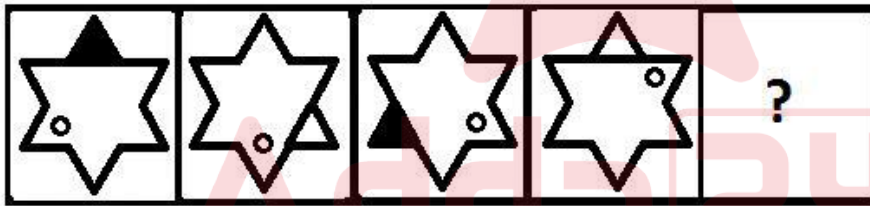
Q.20 Identify the odd triad from among the given number triads.

- Ans
- ✗ 1. 2, 7, 53
  - ✗ 2. 4, 6, 50
  - ✗ 3. 3, 5, 34
  - ✓ 4. 2, 4, 18

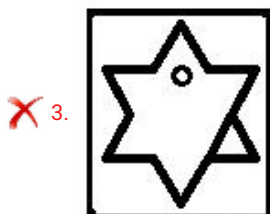
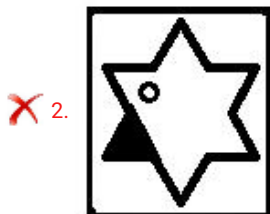
Question ID : 497959411

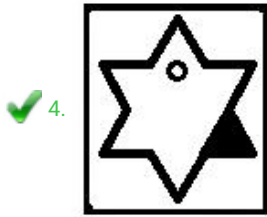
Section : Mental Ability2

Q.1 Select the figure that will come next in the following series.



Ans





Question ID : 497959442

**Q.2** In a code language, POSSIBLE is coded as 1615191992125. How would SERVICE be coded in the same language?

- Ans** ☒ 1. 1951822935  
☒ 2. 1951822835  
☒ 3. 1951821935  
☒ 4. 1951722935

Question ID : 497959435

**Q.3** The following are the criteria set by a company for the post of Accounts Manager.

1. The candidate must have a Master of Commerce (M.Com) degree in Accountancy.
2. The candidate must have obtained more than 65% marks in the selection test and 70% marks in the interview.
3. The age of candidate should not be less than 30 years and not more than 35 years as on 1 April 2019.
4. The candidate must have at least five years' work experience as an Accountant.

(a) If a candidate satisfies all the criteria except criteria no. 1 as given above, but has completed a Master of International Business (MIB) course, she/he must be sent to the Head (Accounts) for further interview.

(b) If a candidate satisfies all the criteria except criteria no. 2, but has more than six years of work experience as an Accountant, then the candidate must be sent to the Senior Accounts Manager for further interview.

The details of a candidate are given below. You have to take one of the following decisions based on the information provided and the conditions and sub-conditions given above. Do not assume anything other than the information provided in the question.

Rachana has completed an MIB degree with 54%. She has four years' experience working as an Accountant. She was born on 2 June 1986. She obtained 66% marks in the written test and 70% marks in the interview.

**Ans** ☒ 1.

The candidate is to be sent to the Head (Accounts) for further interview.

☒ 2. The candidate is to be selected.

☒ 3. The candidate is to be rejected.

☒ 4.

The candidate is to be sent to the Senior Accounts Manager for further interview.

Question ID : 497959427

**Q.4** Two statements are followed by two conclusions numbered I and II. Assuming the information given in the statements to be true, even if they do not conform to real-world knowledge, decide which of the conclusions logically follow(s) from the statements.

**Statements:**

1. All officers are singers.
2. Some singers are musicians.

**Conclusions:**

- I. Some singers are officers.
- II. No singer is an officer.

**Ans** ☒ 1. Only conclusion I follows

- ☒ 2. Only conclusion II follows  
☒ 3. Both conclusions I and II follow  
☒ 4. Either conclusion I or II follows

Question ID : 497959428

Q.5 Read the given information and answer the question that follows.

- $A + B$  means 'A is the father of B'
- $A - B$  means 'A is the husband of B'
- $A \times B$  means 'A is the daughter of B'
- $A \div B$  means 'A is the sister of B'

If  $P + M \div Q \times N \times T - U$ , then how is P related to N?


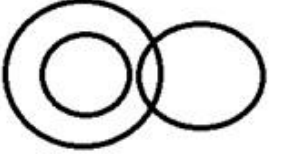

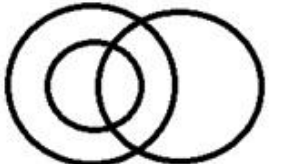
- Ans
- ☒ 1. Husband  
☒ 2. Brother  
☒ 3. Son  
☒ 4. Uncle

Question ID : 497959433

Q.6 Select the Venn diagram that best represents the relationship between the given set of classes.

Men, Gynaecologist, Doctor

Ans

- ☒ 1. 
- ☒ 2. 
- ☒ 3. 
- ☒ 4. 

Question ID : 497959443

**Q.7** Jiva is the daughter of Kartik. Kartik has two sons. Adah is the daughter of Mridula, who is the wife of Kartik's son. Veenu is Prem's mother. Prem is the brother of Ashok, who is the father of Adah. How is Adah related to Veenu?

- Ans**
- ☒ 1. Mother
  - ☒ 2. Sister
  - ☒ 3. Daughter
  - ☒ 4. Grand-daughter

Question ID : 497959434

**Q.8** Six symbol clusters are given below, two of which are the same. Find the two clusters that are exactly the same.

- (A) & % \$ # % \$ % # & % \$
- (B) & % \$ & % \$ @ # & % \$
- (C) & % \$ @ % \$ @ # & % \$
- (D) & % \$ # % \$ @ # % \$
- (E) & % \$ # % \$ @ # & % \$
- (F) & % \$ # % \$ @ # & % \$

- Ans**
- ☒ 1. B and C
  - ☒ 2. A and D
  - ☒ 3. C and D
  - ☒ 4. E and F

Question ID : 497959432

**Q.9** Three statements are followed by four conclusions numbered I, II, III and IV. Assuming the information given in the statements to be true, even if they do not conform to real-world knowledge, decide which of the conclusions logically follow(s) from the statements.

**Statements:**

- 1. All girls are experts.
- 2. Some experts are tourists.
- 3. All tourists are foreigners.

**Conclusions:**

- I. Some foreigners are experts.
- II. Some foreigners are girls.
- III. No foreigner is a girl.
- IV. All tourists are experts.

- Ans**
- ☒ 1. Conclusion I, II and IV follow
  - ☒ 2. Conclusion IV and either II or III follows
  - ☒ 3. Conclusion I and either II or III follows
  - ☒ 4. All conclusions follow

Question ID : 497959429

**Q.10** Which of the addresses given as options is exactly the same as the address given below?

P Narsinh Kumar Raghavan  
House no. 5432/1, Silver Paradise  
Kings Square, Nemesis Road,  
Thiruchirapalli – 562 025

**Ans**



✓ 1. P Narsinh Kumar Raghavan  
House no. 5432/1, Silver Paradise  
Kings Square, Nemesis Road,  
Thiruchirapalli – 562 025

✗ 2. P Narsinh Kumar Raghavan  
House no. 5432/1, Silver Paradise  
Kings Square, Nemesis Road,  
Thiruchirapalli – 562 025

✗ 3. P Narsinh Kumar Raghavan  
House no. 5432/1, Silver Paradise  
Kings Square, Nemesis Road,  
Thiruchirapalli – 562 025

✗ 4. P Narsinh Kumar Raghavan  
House no. 5432/1, Silver Paradise  
Kings Square, Nemesis Road,  
Thiruchirapalli – 562 025

Question ID : 497959430

**Q.11** The following are the criteria set by a company for the post of Accounts Manager.

1. The candidate must have a Master of Commerce (M.Com) degree in Accountancy.
2. The candidate must have obtained more than 65% marks in the selection test and 70% marks in the interview.
3. The age of candidate should not be less than 30 years and not more than 35 years as on 1 April 2019.
4. The candidate must have at least five years' work experience as an Accountant.

(a) If a candidate satisfies all the criteria except criteria no. 1 as given above, but has completed a Master of International Business (MIB) course, she/he must be sent to the Head (Accounts) for further interview.

(b) If a candidate satisfies all the criteria except criteria no. 2, but has more than six years of work experience as an Accountant, then the candidate must be sent to the Senior Accounts Manager for further interview.

The details of a candidate are given below. You have to take one of the following decisions based on the information provided and the conditions and sub-conditions given above. Do not assume anything other than the information provided in the question.

Manav has completed his M.Com degree in Accountancy. He also has an MIB degree. He has five years' experience working as an Accountant. He was born on 13 May 1987. He obtained 66% marks in the written test and 70% marks in the interview.

**Ans** ✗ 1. The candidate is to be rejected.

✗ 2.

The candidate is to be sent to the Head (Accounts) for further interview.

✗ 3.

The candidate is to be sent to the Senior Accounts Manager for further interview.

✓ 4. The candidate is to be selected.

Question ID : 497959426

**Q.12** Six numbers are given below, two of which are the same. Find the two numbers that are the same.

- (A) 254879381 (B) 254879831  
(C) 254897381 (D) 254897381  
(E) 254897831 (F) 258497381

**Ans** ✓ 1. C and D

- ☒ 2. A and B  
☒ 3. C and E  
☒ 4. E and F

Question ID : 497959431

**Q.13** There are five teachers named A, B, C, D and E. Each of them teaches one of five different subjects i.e. Physics, Chemistry, Botany, Zoology and Mathematics. C does not teach Botany, Chemistry or Physics. A does not teach Botany or Zoology. Mathematics is taught by B. E does not teach Chemistry or Botany. Who teaches Physics?

- Ans** ☒ 1. A or C  
☒ 2. E  
☒ 3. A or E  
☒ 4. A

Question ID : 497959425

**Q.14** Select the letter cluster that will come in place of the question mark (?) in the following series.

FNV, CJQ, ZFL, ?, TXB

- Ans** ☒ 1. VBG  
☒ 2. WBG  
☒ 3. WCH  
☒ 4. WCG

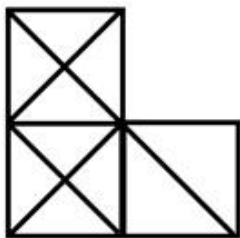
Question ID : 497959441

**Q.15** If in a code language, MAGNIFICENT is written as JOHBNFUOFDJ. How would PROMISCUITY be written in the same language?

- Ans** ☒ 1. JNSPQIZUJVD  
☒ 2. JNPSQJAUJVD  
☒ 3. JNPSQSZUJVD  
☒ 4. JNPSQIJUZVD

Question ID : 497959436

**Q.16** How many triangles are present in the figure given below?



- Ans** ☒ 1. 20  
☒ 2. 18  
☒ 3. 22



✓ 4. 21

Question ID : 497959444

Q.17 Select the number that will come next in the following series.

40, 20, 20, 30, 60, ?

- Ans
- ✗ 1. 130
  - ✗ 2. 140
  - ✓ 3. 150
  - ✗ 4. 110

Question ID : 497959440

Q.18 The total of three numbers is 120. The second number is two times the first number. The third number is three times the first number. What is the third number?

- Ans
- ✗ 1. 40
  - ✓ 2. 60
  - ✗ 3. 80
  - ✗ 4. 50

Question ID : 497959438

Q.19 Select the number that will come next in the following series.

15, 19, 28, 44, 69, ?

- Ans
- ✗ 1. 103
  - ✓ 2. 105
  - ✗ 3. 100
  - ✗ 4. 99

Question ID : 497959439

Q.20 There are five boxes: A, B, C, D and E. Box B is twice as heavy as box A. Box C is 20 kg heavier than box E. Box D is one-and-a-half times as heavy as box E, and box C is four times as heavy as box A. The weight of box E is 20 kg. Which of the boxes is the heaviest of them all and what is its weight?

- Ans
- ✗ 1. D, 40 kg
  - ✗ 2. D, 60 kg
  - ✓ 3. C, 40 kg
  - ✗ 4. C, 60 kg

Question ID : 497959437

Section : General Awareness1

Q.1

In the National Institutional Ranking Framework (NIRF) 2019 ranking, name the college that got the top ranking. This college completes a hat-trick in #1 ranking in 2019.

- Ans
- ☒ 1. Hindu College, Delhi University
  - ☒ 2. Lady Sri Ram College for Women, Delhi University
  - ☒ 3. Miranda House, Delhi University
  - ☒ 4. St Stephens College, Delhi University

Question ID : 497959447

Q.2 निम्नलिखित बॉलीवुड संगीत निर्देशकों के 4 जोड़े में से, एक जोड़ा ब्लड ब्रदर्स (रक्त भाइयों) का है। इस सहोदर जोड़ी का नाम बताइए।

- Ans
- ☒ 1. कल्याणजी- आनंदजी
  - ☒ 2. शंकर- जयकिशन
  - ☒ 3. नदीम- श्रवण
  - ☒ 4. लक्ष्मीकांत- प्यारेलाल

Question ID : 497959462

Q.3 निम्नलिखित में से कौन सी उच्च न्यायालय की बेंच कोर्ट पोर्ट ब्लेयर से संचालित होती है और यह अंडमान और निकोबार की न्यायपालिका की सर्वोच्च संस्था है?

- Ans
- ☒ 1. मद्रास उच्च न्यायालय
  - ☒ 2. तेलंगाना उच्च न्यायालय
  - ☒ 3. कलकत्ता उच्च न्यायालय
  - ☒ 4. पटना उच्च न्यायालय

www.exammix.com

Question ID : 497959463

Q.4 John Dalton, the pioneering atomic theory scientist, was born in which country?

- Ans
- ☒ 1. England
  - ☒ 2. Netherlands
  - ☒ 3. France
  - ☒ 4. Austria

Question ID : 497959452

Q.5 स्ट्राँसबर्ग शहर यूरोपीय संसद की आधिकारिक सीट है। स्ट्राँसबर्ग किस यूरोपीय देश में स्थित है?

- Ans
- ☒ 1. फ्रांस
  - ☒ 2. ऑस्ट्रिया
  - ☒ 3. स्विट्जरलैंड
  - ☒ 4. बेल्जियम

Question ID : 497959455

Q.6 The condition called leucoderma affects which of these human body parts?

- Ans
- ☐ 1. Blood
  - ☐ 2. Nervous system
  - ☐ 3. Heart
  - ☒ 4. Skin

Question ID : 497959464

Q.7 If you see a sign '5T' while driving on an Indian road, what does that road sign mean?

- Ans
- ☐ 1. A signal with 5 roads branching out is coming ahead
  - ☐ 2. 5 km is the speed limit of the road ahead
  - ☐ 3. There are 5 turns ahead of the road
  - ☒ 4. Vehicles weighing more than 5 tonnes should not use the road

Question ID : 497959459

Q.8 Which of these instruments is NOT a woodwind musical instrument?

- Ans
- ☐ 1. Flute
  - ☐ 2. Clarinet
  - ☒ 3. Sarod
  - ☐ 4. Oboe

Question ID : 497959450

Q.9 The ever popular antiseptic product called Dettol is a brand owned by which of these companies?

- Ans
- ☐ 1. Marico Group
  - ☐ 2. ITC Group
  - ☒ 3. Reckitt Benckiser Group
  - ☐ 4. Jyothi Laboratories

Question ID : 497959445

Q.10 ईसाईयों का ईस्टर का त्योहार हमेशा किस दिन पड़ता है?

- Ans
- ☐ 1. बुधवार
  - ☐ 2. शुक्रवार
  - ☒ 3. रविवार
  - ☐ 4. गुरुवार

Question ID : 497959446

Q.11 What is the name of the visa that enables you to travel to 23 European countries?

- Ans
- ☐ 1. Europe Visa
  - ☐ 2. Baltic Visa
  - ☐ 3. Euro Visa
  - ☒ 4. Schengen Visa

Question ID : 497959457

Q.12 13वीं शताब्दी में आहोम साम्राज्य भारत के किस हिस्से में विकसित हुआ था?

- Ans
- ☐ 1. दक्षिणी भारत
  - ☒ 2. पूर्वी भारत
  - ☐ 3. उत्तरी भारत
  - ☐ 4. पश्चिमी भारत

Question ID : 497959448

Q.13 विनाशकारी लातूर भूकंप (महाराष्ट्र) किस वर्ष में हुआ था?

- Ans
- ☐ 1. 1989
  - ☐ 2. 1999
  - ☒ 3. 1993
  - ☐ 4. 2004

Question ID : 497959454

Q.14 बोलीविया के सालार दे उयूनी नमक रेगिस्तान को निम्नलिखित में से किस सामग्री का 50-70% भंडार का घर माना जाता है?

- Ans
- ☐ 1. थोरियम
  - ☐ 2. चांदी
  - ☒ 3. लिथियम
  - ☐ 4. यूरेनियम

Question ID : 497959458

Q.15 SGS1 एक भूस्थिर उपग्रह है जिसे किसी अन्य देश की तरफ से फेंच गुयाना से लॉन्च किया गया है। SGS1 उपग्रह निम्नलिखित में से किस देश से संबंधित है?

- Ans
- ☐ 1. सिंगापुर
  - ☐ 2. दक्षिण अफ्रीका
  - ☒ 3. सऊदी अरब
  - ☐ 4. दक्षिण कोरिया

Question ID : 497959460

Q.16 The Security Printing and Minting Corporation of India Limited (SPMCIL) has got its own Security Paper Mill that produces the paper for bank notes. Where is the Security Paper Mill located?

- Ans
- ☒ 1. Nashik, Maharashtra
  - ☒ 2. Dewas, Madhya Pradesh
  - ☒ 3. Kolkata, West Bengal
  - ☒ 4. Hoshangabad, Madhya Pradesh

Question ID : 497959449

Q.17 The Bombay High Court has three bench courts. Which of the 4 cities listed below is NOT one of the benches of the Bombay High Court?

- Ans
- ☒ 1. Pune
  - ☒ 2. Nagpur
  - ☒ 3. Aurangabad
  - ☒ 4. Panaji

Question ID : 497959453

Q.18 This institute was founded in 1878 as the British Imperial Forest School. It is now called the Forest Research Institute (FRI). Where is it located?

- Ans
- ☒ 1. Dehradun
  - ☒ 2. Nainital
  - ☒ 3. Rishikesh
  - ☒ 4. Darjeeling

Question ID : 497959456

Q.19 निम्नलिखित में से किस तमिलनाडु स्वतंत्रता सेनानी ने 'कप्पलोटिया तमिलन' (तमिलनाडु निवासी जो एक शिपिंग कंपनी चलाते हैं) का खिताब अर्जित किया?

- Ans
- ☒ 1. सुब्रमण्यम शिव (Subramaniya Siva)
  - ☒ 2. धीरन चिन्नामलाई
  - ☒ 3. वी.ओ. चिदम्बरम पिल्लै
  - ☒ 4. वीरपंडिया कट्टबोमन

Question ID : 497959461

Q.20 राजनीतिक दलों को दान देने की सुविधा देने वाले चुनावी बांड की घोषणा निम्नलिखित किस केंद्रीय बजट में की गई थी?

- Ans
- ☒ 1. केंद्रीय बजट 2017-18
  - ☒ 2. केंद्रीय बजट 2018-19
  - ☒ 3. केंद्रीय बजट 2015-16



✗ 4. केंद्रीय बजट 2016-17

Question ID : 497959451

Section : General Awareness2

Q.1 बॉयल का नियम, चार्ल्स का नियम और गे-लुसैक का नियम - यह तीन नियम भौतिकी में निम्नलिखित किस अध्ययन के दायरे में आते हैं?

- Ans
- ✗ 1. रेडियोधर्मिता का अध्ययन
  - ✗ 2. प्रकाश का अध्ययन
  - ✓ 3. गैसों का अध्ययन
  - ✗ 4. परमाणुओं का अध्ययन

Question ID : 497959483

Q.2 What is the colour that is prescribed for school buses in India?

- Ans
- ✗ 1. Green
  - ✓ 2. Yellow
  - ✗ 3. Red
  - ✗ 4. Blue

Question ID : 497959474

Q.3 अप्रैल 2019 में विकीलीक्स के संस्थापक जूलियन असांज (Julian Assange) को लंदन में किस देश के दूतावास से गिरफ्तार किया गया था?

- Ans
- ✗ 1. बोलीविया
  - ✗ 2. कोलम्बिया
  - ✓ 3. इक्वाडोर
  - ✗ 4. वेनेजुएला

Question ID : 497959470

Q.4 यूनाइटेड नेशंस कांफ्रेंस ऑन ट्रेड एंड डेवलपमेंट (UNCTAD) व्यापार, निवेश और विकास के मुद्दों से निपटने के लिए संयुक्त राष्ट्र द्वारा स्थापित एक स्थायी अंतर सरकारी निकाय है। इसका मुख्यालय कहाँ स्थित है?

- Ans
- ✓ 1. जिनेवा
  - ✗ 2. ब्रसेल्स
  - ✗ 3. न्यूयॉर्क
  - ✗ 4. पेरिस

Question ID : 497959484

Q.5 India conducted joint military exercise called 'BOLD KURUKSHETRA 2019' in April 2019 with which country?



- Ans
- ☒ 1. Singapore
  - ☐ 2. Russia
  - ☐ 3. Iran
  - ☐ 4. Israel

Question ID : 497959467

Q.6 Name the telescope that has recently created the live image of the black hole.

- Ans
- ☒ 1. Event Horizon Telescope
  - ☐ 2. Hubble Space Telescope
  - ☐ 3. Keck Observatory Telescope
  - ☐ 4. Spitzer Space Telescope

Question ID : 497959476

Q.7 उस अर्थशास्त्री का क्या नाम है जो मुद्रवादी सिद्धांत (theory of monetarism) से काफी करीब से जुड़ा है?

- Ans
- ☒ 1. मिल्टन फ्रीडमैन
  - ☐ 2. जोसेफ स्टिग्लिट्ज़
  - ☐ 3. जॉन मेनार्ड कीन्स
  - ☐ 4. एडम स्मिथ

Question ID : 497959472

Q.8 Which city in Central India is famous for its 'Diamond Railway Crossing', a point where the North-South Railway lines meet the East-West Railway lines?

- Ans
- ☐ 1. Nanded
  - ☐ 2. Indore
  - ☐ 3. Bhopal
  - ☒ 4. Nagpur

Question ID : 497959468

Q.9 One set of digits in the GST number is a direct replication of which of these identities of the GST holder?

- Ans
- ☒ 1. PAN Card Number
  - ☐ 2. Mobile Number
  - ☐ 3. Aadhaar Card Number
  - ☐ 4. Ration Card Number

Question ID : 497959481

Q.10 What is the name for the Spanish and Portuguese Parliaments? The name has been derived from their common medieval history.

- Ans
- ☐ 1. Duma

- ☒ 2. El Paso
- ☒ 3. Cortes
- ☒ 4. Caldera

Question ID : 497959482

Q.11 बाइपेन द्वीप, अरब सागर में भारतीय तट के पास एक हलचल और घनी आबादी वाला द्वीप है। बाइपेन निम्नलिखित में से किस शहर के पास स्थित है?

- Ans
- ☒ 1. कालीकट
  - ☒ 2. मंगलौर
  - ☒ 3. कोच्चि
  - ☒ 4. त्रिवेंद्रम

Question ID : 497959477

Q.12 यूजीनिक्स, सामाजिक नियंत्रण के तहत ऐसी एजेंसियों का अध्ययन है जो भविष्य की पीढ़ियों के नस्लीय गुणों को शारीरिक या मानसिक रूप से सुधार या बिगाड़ सकता है। अध्ययन की इस धारा का जनक किसे माना जाता है?

- Ans
- ☒ 1. डेविड बाल्टीमोर
  - ☒ 2. चार्ल्स डार्विन
  - ☒ 3. फ्रांसिस गाल्टन
  - ☒ 4. रेमंड डार्ट

Question ID : 497959471

Q.13 Though Spanish is the most widely spoken language, this country is also home to languages such as Nahuatl, Yucatec Maya and Mixtec. Which country is being referred to here?

- Ans
- ☒ 1. Mexico
  - ☒ 2. Chile
  - ☒ 3. Bolivia
  - ☒ 4. Argentina

Question ID : 497959473

Q.14 In which city of India is the Indian Diamond Institute (IDI) situated?

- Ans
- ☒ 1. Bangalore
  - ☒ 2. Vadodara
  - ☒ 3. Mumbai
  - ☒ 4. Surat

Question ID : 497959475

Q.15 हिंदू पौराणिक कथाओं के अनुसार, निम्नलिखित में से कौन सा हथियार भगवान परशुराम के साथ जुड़ा हुआ है? केरल का जन्म भगवान परशुराम द्वारा इस हथियार को अरब सागर में फेंकने से हुआ है।

Ans

- ☐ 1. गदा
- ☒ 2. कुल्हाड़ी
- ☐ 3. तलवार
- ☐ 4. धनुष और बाण

Question ID : 497959466

Q.16 In which year was the Postal Index Number (PIN) or PIN Code system started in India?

- Ans ☒ 1. 1972
- ☐ 2. 1947
- ☐ 3. 1950
- ☐ 4. 1998

Question ID : 497959469

Q.17 विश्व स्वास्थ्य संगठन (WHO) वर्ष के किस दिन विश्व स्वास्थ्य दिवस मनाता है?

- Ans ☐ 1. 7 फरवरी
- ☒ 2. 7 अप्रैल
- ☐ 3. 7 जनवरी
- ☐ 4. 7 मार्च

Question ID : 497959465

Q.18 ब्रांडे और इसके विश्व प्रसिद्ध थिएटर शो किस महान शहर का पर्याय हैं?

- Ans ☒ 1. न्यूयॉर्क
- ☐ 2. पेरिस
- ☐ 3. लंदन
- ☐ 4. शिकागो

Question ID : 497959480

Q.19 निम्नलिखित में से कौन से देशों का समूह इबेरियन प्रायद्वीप बनाते हैं?

- Ans ☐ 1. आज के उत्तर और दक्षिण कोरिया
- ☐ 2. आज के इराक और सीरिया
- ☐ 3. आज के उरुग्वे और अर्जेंटीना
- ☒ 4. आज के स्पेन और पुर्तगाल

Question ID : 497959479

Q.20 वारंगल किला, जिसका सजावटी द्वार अब तेलंगाना राज्य का आधिकारिक प्रतीक है, निम्नलिखित में से किस राजवंश द्वारा बनाया गया था?

- Ans
- ☒ 1. चंदेल राजवंश
  - ☒ 2. विजयनगर राजवंश
  - ☒ 3. काकतीय राजवंश
  - ☒ 4. राष्ट्रकूट राजवंश

Question ID : 497959478

#### Section : Arithmetic Ability1

Q.1 Solve the following.

$$\left[ \frac{8(2.65)^2 - 1}{(5.3)^2 + 6.3} \right] = ?$$

- Ans
- ☒ 1. 5.35
  - ☒ 2. 3.35
  - ☒ 3. 4.30
  - ☒ 4. 6.45

Question ID : 497959488

Q.2 If the numerator of a fraction is decreased by 20% and the denominator is increased by 25%, the value of the fraction becomes  $\frac{4}{7}$ . What is the original fraction?

- Ans
- ☒ 1.  $\frac{25}{32}$
  - ☒ 2.  $\frac{30}{49}$
  - ☒ 3.  $\frac{25}{28}$
  - ☒ 4.  $\frac{15}{17}$

Question ID : 497959500

Q.3 The average score of a class in a test was 56. The average score of the brightest 25% students was 80 and the average score of the dullest 35% students was 30. If the ratio of the boys and girls in the remaining 40% of students was 2:3 and the average score of the boys in this remaining group was 60, what was approximately the average score of the girls in the remaining 40%?

- Ans
- ☒ 1. 62.40
  - ☒ 2. 68.75
  - ☒ 3. 60.20
  - ☒ 4. 66.25

Question ID : 497959503

Q.4 The value of  $(0.3 \times 0.3 - 0.02) (0.2 \times 0.2 + 0.01)^{-1}$  is equal to:

- Ans
- ☒ 1. 1.45
  - ☒ 2. 1.70
  - ☒ 3. 0.40
  - ☒ 4. 1.40

Question ID : 497959487

Q.5 In an examination, the average marks of a student per paper were 72. If he would have secured 15 more marks in Mathematics and 17 more marks in History, his average marks per paper would have been 75.2. How many papers were there in the examination?

- Ans
- ☒ 1. 12
  - ☒ 2. 8
  - ☒ 3. 11
  - ☒ 4. 10

Question ID : 497959502

Q.6 Find the value of  $x$  in the following equation.

$$\frac{27.48 - x}{3.5 \times 0.3} = 20$$

- Ans
- ☒ 1. 3.68
  - ☒ 2. 9.78
  - ☒ 3. 6.48
  - ☒ 4. 7.48

Question ID : 497959485

Q.7 A shopkeeper purchased 30 kg of wheat at ₹ 30 per kg and mixed it with 40 kg of wheat which was purchased at ₹ 20 per kg. At what approximate rate should he sell the mixture to gain a profit of 10%?

- Ans
- ☒ 1. ₹ 31.25
  - ☒ 2. ₹ 24.15
  - ☒ 3. ₹ 28.26
  - ☒ 4. ₹ 26.71

Question ID : 497959504

Q.8 An aggregate of 36% of the total marks is required to pass an examination and 60% to get a first class. A student scored 298 marks and failed by 26 marks. How many marks should he have secured to get a first class?

- Ans
- ☒ 1. 540
  - ☒ 2. 560
  - ☒ 3. 420
  - ☒ 4. 480

Question ID : 497959498

Q.9

If  $\frac{1}{4} : \frac{1}{x} = \frac{1}{2x} : \frac{18}{49}$ , what is the value of  $x$  ?

Ans

✓ 1.  $2\frac{1}{3}$

✗ 2.  $3\frac{1}{3}$

✗ 3.  $1\frac{2}{3}$

✗ 4.  $2\frac{2}{3}$

Question ID : 497959495

Q.10 The containers A and B have mixtures of milk and water in the ratios of 3 : 5 and 7 : 9, respectively. If equal quantities from both the containers are mixed to form a new mixture, what will be ratio of milk and water in the new mixture?

Ans

✓ 1. 13 : 19

✗ 2. 13 : 17

✗ 3. 5 : 7

✗ 4. 5 : 9

Question ID : 497959496

Q.11 निम्नलिखित में से वह कौन सी सबसे छोटी संख्या है जिसे 295, 403 और 547 से भाग देने पर हर बार शेषफल 7 आएगा?

Ans

✗ 1. 64

✗ 2. 18

✓ 3. 36

✗ 4. 48

Question ID : 497959493

Q.12 Which one number would replace both the question marks in the following equation?

$$\frac{38}{?} = \frac{?}{342}$$

Ans

✗ 1. 144

✓ 2. 114

✗ 3. 118

✗ 4. 124

Question ID : 497959490

Q.13 If  $2.5 \times (3 + 5) - 18 \div x = 4$ , then the value of  $x$  is:

Ans

✓ 1. 1.125

✗ 2. 0.50

✗ 3. 0.88



✗ 4. 1.25

Question ID : 497959486

Q.14 The HCF of  $\frac{2}{3}$ ,  $\frac{3}{5}$ ,  $\frac{5}{8}$  and  $\frac{8}{9}$  is:

- Ans
- ✗ 1.  $\frac{1}{120}$
  - ✓ 2.  $\frac{1}{360}$
  - ✗ 3.  $\frac{1}{180}$
  - ✗ 4.  $\frac{1}{60}$

Question ID : 497959492

Q.15 If 30% of 25% of  $\frac{5}{7}$  of  $x = 105$ , what is the value of  $x$  ?

- Ans
- ✗ 1. 1880
  - ✗ 2. 1760
  - ✓ 3. 1960
  - ✗ 4. 1660

Question ID : 497959499

Q.16 If  $x : y = 5 : 3$ , find the value of  $\frac{8x + 5y}{7x - 5y}$ .

- Ans
- ✗ 1.  $2\frac{1}{4}$
  - ✗ 2.  $1\frac{1}{2}$
  - ✓ 3.  $2\frac{3}{4}$
  - ✗ 4.  $3\frac{3}{4}$

Question ID : 497959494

Q.17 Find the greatest four-digit number that will leave remainders 5, 6, 12 and 17, when divided by 8, 9, 15 and 20 respectively.

- Ans
- ✗ 1. 9728
  - ✗ 2. 9993
  - ✗ 3. 8723
  - ✓ 4. 9723

Question ID : 497959491

**Q.18** The average weight of 12 girls is 6 kg less than the average weight of 18 boys. If the total weight of 12 girls is 276 kg, what is the average weight of 12 girls and 18 boys taken together?

- Ans
- ☒ 1. 25.4 kg
  - ☒ 2. 28.8 kg
  - ☒ 3. 27.2 kg
  - ☒ 4. 26.6 kg

Question ID : 497959501

**Q.19** Solve the following.

$$9.25 - \frac{8.5}{1 + \frac{1}{2 + \frac{1}{4/5}}} = ?$$

- Ans
- ☒ 1. 2.75
  - ☒ 2. 3.25
  - ☒ 3. 3.65
  - ☒ 4. 2.50

Question ID : 497959489

**Q.20** An amount of ₹ 1,268 is to be divided among A, B and C such that their shares when reduced by ₹ 7, ₹ 12 and ₹ 17 respectively would be in the ratio of 2 : 5 : 7. What is B's share?

- Ans
- ☒ 1. ₹ 633
  - ☒ 2. ₹ 582
  - ☒ 3. ₹ 452
  - ☒ 4. ₹ 181

Question ID : 497959497

#### Section : Arithmetic Ability2

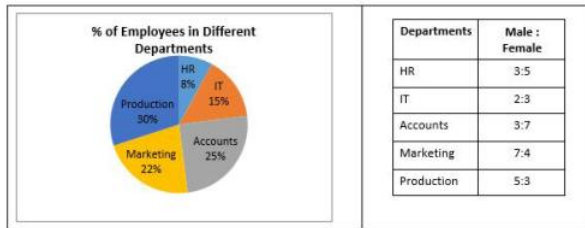
**Q.1** The difference between the compound interest and simple interest on a certain sum of money at 10% interest per annum for 2 years is ₹ 185. What is the sum?

- Ans
- ☒ 1. ₹ 22,500
  - ☒ 2. ₹ 24,500
  - ☒ 3. ₹ 37,000
  - ☒ 4. ₹ 18,500

Question ID : 497959511

**Q.2**

The following pie chart shows the percentage distribution of a total of 400 employees in different departments of a company. The table shows the ratio of male to female employees in different departments. Study the chart and the table and answer the question that follows.



If 40% of the male employees and 60% of the female employees in each department are executives, what is the ratio of male non-executives to female non-executives in the Accounts department?

- Ans
- ✓ 1. 9 : 14
- ✗ 2. 7 : 11
- ✗ 3. 4 : 7
- ✗ 4. 9 : 11

Question ID : 497959524

Q.3 At simple interest, a certain sum of money amounts to ₹ 1,488 in 2 years and to ₹ 1,776 in 4 years. Find the sum.

- Ans
- ✗ 1. ₹ 900
- ✗ 2. ₹ 1,600
- ✗ 3. ₹ 1,450
- ✓ 4. ₹ 1,200

Question ID : 497959507

Q.4 A 50-cm-wide path is made around a circular garden having a diameter of 10 m. What is approximately the area of the path?

- Ans
- ✗ 1. 32.20 m<sup>2</sup>
- ✓ 2. 16.50 m<sup>2</sup>
- ✗ 3. 18.85 m<sup>2</sup>
- ✗ 4. 13.35 m<sup>2</sup>

Question ID : 497959512

Q.5 By selling 78 apples, a fruit seller gains the selling price of 18 apples. What is his gain percent?

- Ans
- ✗ 1. 33.3%
- ✗ 2. 23.7%
- ✓ 3. 30%
- ✗ 4. 25%

Question ID : 497959505

Q.6 A certain sum amounts to ₹ 1,320 after 2 years and to ₹ 1,760 after 4 years on compound interest. What is the sum?

- Ans
- ✗ 1. ₹ 1,200
- ✓ 2. ₹ 990

3. ₹ 1,080

4. ₹ 1,120

Question ID : 497959510

**Q.7** The following table shows the total number of students studying in various colleges over six years. Study the table and answer the question that follows.

Year	College			
	A	B	C	D
2013	325	410	210	320
2014	270	380	260	340
2015	420	440	310	410
2016	360	260	250	260
2017	275	350	340	360
2018	350	360	230	310

What is the ratio of the total number of students studying in College C to that in D over the six years?

Ans 1. 5 : 6

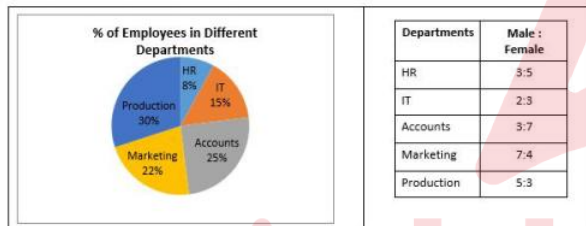
2. 4 : 7

3. 2 : 3

4. 4 : 5

Question ID : 497959520

**Q.8** The following pie chart shows the percentage distribution of a total of 400 employees in different departments of a company. The table shows the ratio of male to female employees in different departments. Study the chart and the table and answer the question that follows.



What is the total number of female employees in the Marketing department?

Ans 1. 56

2. 45

3. 32

4. 36

Question ID : 497959522

**Q.9** The length of a rectangle is twice its breadth. If its length as well as breadth is increased by 5 cm, its area increases by  $250 \text{ cm}^2$ . What is the length of the rectangle?

Ans 1. 16 cm

2. 30 cm

3. 24 cm

4. 34 cm

Question ID : 497959513

**Q.10** The circumference of the base of a right circular cylinder is 88 cm and its curved surface area is  $1320 \text{ cm}^2$ . What is its volume?

Ans 1.  $7520 \text{ cm}^3$

- ☐ 2.  $8640 \text{ cm}^3$
- ☐ 3.  $6420 \text{ cm}^3$
- ☒ 4.  $9240 \text{ cm}^3$

Question ID : 497959514

**Q.11** A man takes 6 hours 30 minutes to walk from A to B and then drive back from B to A. He would have gained 2 hours if he would have driven both ways. How long would the man take to walk both ways?

- Ans** ☐ 1. 8 hours 15 minutes
- ☒ 2. 8 hours 30 minutes
- ☐ 3. 7 hours 45 minutes
- ☐ 4. 9 hours 30 minutes

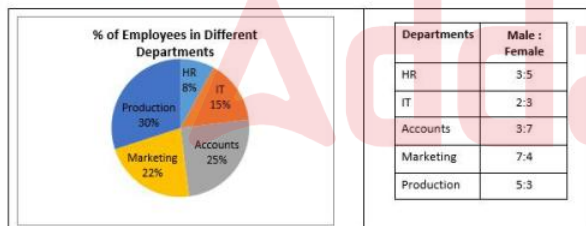
Question ID : 497959518

**Q.12** 4 men and 9 boys can complete a piece of work in 3 days, while 2 men and 6 boys can do the same work in 5 days. How many days would 8 men and 6 boys take to complete the same work?

- Ans** ☒ 1. 2.5 days
- ☐ 2. 2 days
- ☐ 3. 1.5 days
- ☐ 4. 3.5 days

Question ID : 497959516

**Q.13** The following pie chart shows the percentage distribution of a total of 400 employees in different departments of a company. The table shows the ratio of male to female employees in different departments. Study the chart and the table and answer the question that follows.



What is the ratio of the number of female employees to the male employees in the IT and Marketing departments taken together?

- Ans** ☐ 1. 7 : 15
- ☐ 2. 13 : 17
- ☒ 3. 17 : 20
- ☐ 4. 17 : 19

Question ID : 497959523

**Q.14** A sum of ₹ 1,250 was lent out in two parts, one at 12% simple interest and another at 8% simple interest. If the total sum after one year was ₹ 1,382, find the amount lent out at 8% interest.

- Ans** ☐ 1. ₹ 700
- ☐ 2. ₹ 650
- ☒ 3. ₹ 450

✗ 4. ₹ 800

Question ID : 497959508

**Q.15** A man is twice as efficient as a boy. If 1 man and 1 boy can complete a piece of work in 12 days, how many days would a man alone take to complete the same work?

- Ans
- ✗ 1. 16 days
  - ✗ 2. 36 days
  - ✓ 3. 18 days
  - ✗ 4. 24 days

Question ID : 497959515

**Q.16** By selling an article for ₹ 1,744, a seller earns a profit of 20% more than the loss he would have incurred if he had sold the article for ₹ 1,480. What is the price of the article?

- Ans
- ✗ 1. ₹ 1,700
  - ✗ 2. ₹ 1,400
  - ✓ 3. ₹ 1,600
  - ✗ 4. ₹ 1,850

Question ID : 497959506

**Q.17** A cyclist covers the four sides of a square field at speeds of 10, 15, 20 and 25 km per hour. What is approximately the average speed of the cyclist around the field?

- Ans
- ✗ 1. 17.50 km/h
  - ✓ 2. 15.58 km/h
  - ✗ 3. 13.84 km/h
  - ✗ 4. 19.55 km/h

Question ID : 497959519

**Q.18** A car covers the first 42 km of a journey in 40 minutes and the remaining 43 km in 60 minutes. What is the average speed of the car?

- Ans
- ✗ 1. 52.5 km/h
  - ✗ 2. 48.5 km/h
  - ✓ 3. 51 km/h
  - ✗ 4. 47 km/h

Question ID : 497959517

**Q.19** The simple interest on a sum of money at 10% per annum for 2 years is ₹ 2,400. Compounded annually, what would be the compound interest on the same sum for the same period at the same rate of interest?

- Ans
- ✗ 1. ₹ 2,620
  - ✗ 2. ₹ 2,580
  - ✗ 3. ₹ 2,450
  - ✓ 4. ₹ 2,520



Question ID : 497959509

**Q.20** The following table shows the total number of students studying in various colleges over six years. Study the table and answer the question that follows.

Year	College			
	A	B	C	D
2013	325	410	210	320
2014	270	380	260	340
2015	420	440	310	410
2016	360	260	250	260
2017	275	350	340	360
2018	350	360	230	310

If the ratio of the boys to the girls studying in College B over the given years is 2 : 3 and that in College D is 3 : 2, what is the ratio of the number of boys in College B to the number of girls in College D?

- Ans**
- ✓ 1. 11 : 10
- ✗ 2. 17 : 15
- ✗ 3. 10 : 11
- ✗ 4. 33 : 20

Question ID : 497959521

Section : General English1

**Q.1** Select the most appropriate preposition to fill in the blank.

Please ponder \_\_\_\_\_ the problem carefully to find a solution.

- Ans**
- ✗ 1. with
- ✓ 2. over
- ✗ 3. at
- ✗ 4. through

Question ID : 497959534

**Q.2** Select the option that expresses the given sentence in direct speech.

Mr Das exclaimed joyfully that his daughter had won the table tennis championship.

- Ans**
- ✗ 1.  
Mr Das said, "Oh! My daughter wins the table tennis championship."
- ✗ 2.  
Mr Das said, "What! My daughter has won the table tennis championship?"
- ✗ 3.  
Mr Das said, "Alas! His daughter has won the table tennis championship."
- ✓ 4.  
Mr Das said, "Hurrah! My daughter has won the table tennis championship."

Question ID : 497959538

**Q.3**

Select the most appropriate synonym of the given word.

APPALLING

- Ans
- ☒ 1. Terrifying
  - ☐ 2. Attractive
  - ☐ 3. Charming
  - ☐ 4. Ridiculous

Question ID : 497959542

Q.4 Parts of the following sentence are given as options. Identify the part that has an error.

Organic farming strikes a healthy balance across the traditional and modern knowledge.

- Ans
- ☐ 1. a healthy balance
  - ☒ 2. across the traditional
  - ☐ 3. and modern knowledge
  - ☐ 4. Organic farming strikes

Question ID : 497959525

Q.5 Select the alternative that will improve the underlined part of the sentence. In case no improvement is needed, select 'No improvement'.

Activists have criticised the forest department for failure to forming the Aravalli protection task force.

- Ans
- ☐ 1. to fail in forming the
  - ☒ 2. for failing to form the
  - ☐ 3. No improvement
  - ☐ 4. in failing to form the

Question ID : 497959528

Q.6 Select the most appropriate conjunction to fill in the blank.

He is himself not too well off; \_\_\_\_\_, he never disappoints friends in need.

- Ans
- ☒ 1. nevertheless
  - ☐ 2. although
  - ☐ 3. and
  - ☐ 4. otherwise

Question ID : 497959535

Q.7

Select the option that expresses the given sentence in direct speech.

Aanya told me that my painting would win me the first prize.

Ans ☒ 1.

Aanya said to me, "Your painting will win you the first prize."

☒ 2.

Aanya said to me, "My painting will win me the first prize."

☒ 3.

Aanya told to me, "My painting will win me the first prize."

☒ 4.

Aanya said to me, "Your painting would win the first prize."

Question ID : 497959537

Q.8 Parts of the following sentence are given as options. Identify the part that has an error.

The frequent occurrence of torrential rains and floods make disaster management very important.

Ans ☒ 1. very important

☒ 2. make disaster management

☒ 3. of torrential rains and floods

☒ 4. The frequent occurrence

Question ID : 497959526

Q.9 Select the most appropriate ANTONYM of the given word.

FICKLE

Ans ☒ 1. Fresh

☒ 2. Constant

☒ 3. Wicked

☒ 4. Gentle

Question ID : 497959544

Q.10 Select the option that expresses the given sentence in reported speech.

You said, "I checked all my drawers but couldn't find the car keys."

Ans ☒ 1.

You said that you checked all your drawers but couldn't find the car keys.

☒ 2.

You said that you had checked all your drawers but couldn't find the car keys.

☒ 3.

You said that you checked all my drawers but couldn't find the car keys.

✗ 4.

You said that I checked all my drawers but couldn't find the car keys.

Question ID : 497959539

Q.11 Select the most appropriate preposition to fill in the blank.

The murderer was condemned \_\_\_\_\_ life imprisonment.

Ans ✗ 1. for

✗ 2. by

✓ 3. to

✗ 4. of

Question ID : 497959533

Q.12 Select the option that expresses the given sentence in passive voice.

She has submitted all the required documents on time.

Ans ✗ 1. All the required documents has been submitted on time.

✗ 2. All the required documents were submitted on time.

✗ 3.

The submission of all the required documents was done on time.

✓ 4. All the required documents have been submitted on time.

Question ID : 497959531

Q.13 Select the most appropriate synonym of the given word.

CURTAIN

Ans ✗ 1. Abort

✗ 2. Abstain

✓ 3. Shorten

✗ 4. Expand

Question ID : 497959541

Q.14 Select the most appropriate synonym of the given word.

VENERABLE

Ans ✗ 1. Forceful

✓ 2. Respectable

✗ 3. Miserable



✗ 4. Contagious

Question ID : 497959543

Q.15 Select the most appropriate conjunction to fill in the blank.

She cannot hope for a promotion \_\_\_\_\_ her performance improves drastically.

- Ans
- ✗ 1. if
  - ✗ 2. yet
  - ✗ 3. lest
  - ✓ 4. until

Question ID : 497959536

Q.16 Select the option that expresses the given sentence in reported speech.

The policeman said to the suspect, "Where were you at this time yesterday?"

- Ans
- ✓ 1. The policeman asked the suspect where he was at that time the previous day.
  - ✗ 2. The policeman asked the suspect where was he at this time the previous day.
  - ✗ 3. The policeman asked the suspect where was he at that time yesterday.
  - ✗ 4. The policeman asked the suspect that where he was at this time yesterday.

Question ID : 497959540

Q.17 Select the alternative that will improve the underlined part of the sentence. In case no improvement is needed, select 'No improvement'.

No sooner did she leave the house when the burglar broke in.

- Ans
- ✗ 1. No improvement
  - ✗ 2. left the house but the burglar broke in
  - ✓ 3. leave the house than the burglar broke in
  - ✗ 4. left the house when the burglar broke in

Question ID : 497959527

Q.18 Select the option that expresses the given sentence in active voice.

Sweets were being distributed among the staff on the occasion of Diwali.

- Ans
- ✗ 1. They distributed sweets among the staff on the occasion of Diwali.
  - ✓ 2. They were distributing sweets among the staff on the occasion of Diwali.



✗ 3.

They will be distributing sweets among the staff on the occasion of Diwali.

✗ 4.

They are distributing sweets among the staff on the occasion of Diwali.

Question ID : 497959530

Q.19 Select the option that expresses the given sentence in passive voice.

Water the plants regularly lest they die.

Ans

✗ 1. Let the plants to be watered regularly lest they die.

✗ 2. The plants be watered regularly lest they die.

✓ 3. Let the plants be watered regularly lest they die.

✗ 4. The plants should be watered regularly lest they die.

Question ID : 497959532

Q.20 Select the option that expresses the given sentence in active voice.

A special edition of this magazine will be brought out early next year.

Ans

✗ 1.

They are bringing out a special edition of this magazine early next year.

✗ 2.

They will bring out a special edition of that magazine early next year.

✗ 3.

They brought out a special edition of this magazine early next year.

✓ 4.

They will bring out a special edition of this magazine early next year.

Question ID : 497959529

Section : General English2

Q.1 Select the grammatically correct sentence from the given options.

Ans

✗ 1. Either Sourabh or you is to blame for this financial loss.

✗ 2. Either you or Sourabh are to blame for this financial loss.

✗ 3. You or Sourabh are either to blame for this financial loss.

✓ 4. Either you or Sourabh is to blame for this financial loss.

Question ID : 497959558

Q.2 Select the most appropriate meaning of the following idiom.

Pull the strings

- Ans
- ☒ 1. To reduce speed
  - ☒ 2. To be very frank
  - ☒ 3. To manipulate
  - ☒ 4. To be frank

Question ID : 497959549

Q.3 Select the most appropriate meaning of the following idiom.

Make much ado about nothing

- Ans
- ☒ 1. To get rid of something
  - ☒ 2. Make a confession
  - ☒ 3. To treat as unimportant
  - ☒ 4. Make a great fuss about a trifle

Question ID : 497959547

Q.4 Select the most appropriate phrase to fill in the blank.

The mechanic \_\_\_\_\_ repairing the machine immediately.

- Ans
- ☒ 1. set off
  - ☒ 2. set on
  - ☒ 3. set up
  - ☒ 4. set about

Question ID : 497959556

Q.5 Select the correctly spelt word.

- Ans
- ☒ 1. Continuous
  - ☒ 2. Cuntinuous
  - ☒ 3. Continous
  - ☒ 4. Continouse

Question ID : 497959553

Q.6 Select the option that can be used as a one-word substitute for the given group of words.

One who hates mankind

Ans

- ☒ 1. Misnomer
- ☒ 2. Misogynist
- ☒ 3. Misanthrope
- ☒ 4. Malevolent

Question ID : 497959551

Q.7 Select the option that can be used as a one-word substitute for the given group of words.

To preserve from extinction

- Ans
- ☒ 1. Perturb
  - ☒ 2. Persuade
  - ☒ 3. Perplex
  - ☒ 4. Perpetuate

Question ID : 497959550

Q.8 Select the correctly spelt word.

- Ans
- ☒ 1. Neglegence
  - ☒ 2. Negligence
  - ☒ 3. Negligance
  - ☒ 4. Negligense

Question ID : 497959554

Q.9 Select the most appropriate ANTONYM of the given word.

TRANSPARENT

- Ans
- ☒ 1. Clear
  - ☒ 2. Translucent
  - ☒ 3. Opaque
  - ☒ 4. Lucid

Question ID : 497959546

Q.10 Select the most appropriate ANTONYM of the given word.

SURPLUS

- Ans
- ☒ 1. Decrease
  - ☒ 2. Sufficient
  - ☒ 3. Deficit

✗ 4. Abundant

Question ID : 497959545

Q.11 Select the most appropriate phrase to fill in the blank.

The doctor said there was nothing serious and the patient would \_\_\_\_\_ soon.

- Ans
- ✓ 1. come round
  - ✗ 2. come over
  - ✗ 3. come up
  - ✗ 4. come upon

Question ID : 497959555

Q.12 Select the most appropriate meaning of the following idiom.

Order of the day

- Ans
- ✗ 1. Sentence passed by a judge
  - ✗ 2. An impossible situation
  - ✓ 3. Condition prevailing at the time
  - ✗ 4. A state of uncertainty

Question ID : 497959548

Q.13 Select the grammatically correct sentence from the given options.

- Ans
- ✓ 1. Household duties prompted her to take a break from work.
  - ✗ 2. Household duties prompted to take a break from her work.
  - ✗ 3. Her household duties prompted to take a break from work.
  - ✗ 4. A break from work prompted to take her household duties.

Question ID : 497959557

Q.14 Select the option that can be used as a one-word substitute for the given group of words.

One who eats too much

- Ans
- ✗ 1. Greedy
  - ✗ 2. Ravenous
  - ✓ 3. Glutton
  - ✗ 4. Hungry

Question ID : 497959552

Q.15



Select the grammatically correct sentence from the given options.

- Ans
- ☒ 1. Passengers are requested to be remained seated.
  - ☒ 2. Passengers requested to remained seated.
  - ☒ 3. Passengers are requested to be remaining seated.
  - ☒ 4. Passengers are requested to remain seated.

Question ID : 497959559

#### Comprehension:

The special relationship between the client and the therapist is known as a therapeutic relationship or alliance. It is neither a passing acquaintance, nor a permanent relationship. The two major components of this alliance are the contractual nature and the limited duration of the therapy. The client and the therapist willingly enter into an alliance with the purpose of helping the client overcome their problems. The alliance lasts till the client is able to deal with the problems and take control of their life. It is a relationship based on mutual trust and confidence. A high level of trust is essential to enable the client to vent out their feelings openly and unburden themselves by confiding about their psychological and personal problems to the therapist. The therapist encourages this by being empathetic, genuine, warm and understanding. The therapist ensures the client that they would not be judging them and would continue to have positive feelings towards them even if the client is rude or shares deeds or thoughts that may be 'wrong'. This is the unconditional positive regard that the therapist has for the client.

It is very important that the therapist should have empathy for the client and not sympathy or an intellectual understanding of the other person's situation. In case of sympathy, the person feels pity for the other's suffering but cannot feel like the other person. Intellectual understanding is cold and rational and does not evoke feelings of either compassion or empathy. On the other hand, empathy makes one understand the plight of another and see oneself in the other's shoes. It enables one to see things from the other's perspective. Thus, empathy enriches the therapeutic relationship and transforms it into a healing relationship.

The therapeutic relationship also requires that the therapist maintains strict confidentiality of the feelings, thoughts, actions and experiences disclosed by the client. The therapist must not betray the trust of the client or exploit them in any way. It is a professional relationship, and must remain so.

#### SubQuestion No : 16

Q.16 Which of the following statements is NOT true?

- Ans
- ☒ 1. A good therapist wins the confidence of the client.
  - ☒ 2. A good therapeutic alliance is an eternal bond.
  - ☒ 3. A therapist encourages the client to overcome all problems.



✗ 4. A therapist plays the role of a healer.

Question ID : 497959565

**Comprehension:**

The special relationship between the client and the therapist is known as a therapeutic relationship or alliance. It is neither a passing acquaintance, nor a permanent relationship. The two major components of this alliance are the contractual nature and the limited duration of the therapy. The client and the therapist willingly enter into an alliance with the purpose of helping the client overcome their problems. The alliance lasts till the client is able to deal with the problems and take control of their life. It is a relationship based on mutual trust and confidence. A high level of trust is essential to enable the client to vent out their feelings openly and unburden themselves by confiding about their psychological and personal problems to the therapist. The therapist encourages this by being empathetic, genuine, warm and understanding. The therapist ensures the client that they would not be judging them and would continue to have positive feelings towards them even if the client is rude or shares deeds or thoughts that may be 'wrong'. This is the unconditional positive regard that the therapist has for the client.

It is very important that the therapist should have empathy for the client and not sympathy or an intellectual understanding of the other person's situation. In case of sympathy, the person feels pity for the other's suffering but cannot feel like the other person. Intellectual understanding is cold and rational and does not evoke feelings of either compassion or empathy. On the other hand, empathy makes one understand the plight of another and see oneself in the other's shoes. It enables one to see things from the other's perspective. Thus, empathy enriches the therapeutic relationship and transforms it into a healing relationship.

The therapeutic relationship also requires that the therapist maintains strict confidentiality of the feelings, thoughts, actions and experiences disclosed by the client. The therapist must not betray the trust of the client or exploit them in any way. It is a professional relationship, and must remain so.

SubQuestion No : 17

Q.17 What are the two key ingredients of a therapeutic relationship?

Ans

- ✓ 1. Trust and confidentiality
- ✗ 2. Trust and intellectual understanding
- ✗ 3. Empathy and sound advice
- ✗ 4. Confidence and mutual interest

Question ID : 497959562

**Comprehension:**

The special relationship between the client and the therapist is known as a therapeutic relationship or alliance. It is neither a passing acquaintance, nor a permanent relationship. The two major components of this alliance are the contractual nature and the limited duration of the therapy. The client and the therapist willingly enter into an alliance with the purpose of helping the client overcome their problems. The alliance lasts till the client is able to deal with the problems and take control of their life. It is a relationship based on mutual trust and confidence. A high level of trust is essential to enable the client to vent out their feelings openly and unburden themselves by confiding about their psychological and personal problems to the therapist. The therapist encourages this by being empathetic, genuine, warm and understanding. The therapist ensures the client that they would not be judging them and would continue to have positive feelings towards them even if the client is rude or shares deeds or thoughts that may be 'wrong'. This is the unconditional positive regard that the therapist has for the client.

It is very important that the therapist should have empathy for the client and not sympathy or an intellectual understanding of the other person's situation. In case of sympathy, the person feels pity for the other's suffering but cannot feel like the other person. Intellectual understanding is cold and rational and does not evoke feelings of either compassion or empathy. On the other hand, empathy makes one understand the plight of another and see oneself in the other's shoes. It enables one to see things from the other's perspective. Thus, empathy enriches the therapeutic relationship and transforms it into a healing relationship.

The therapeutic relationship also requires that the therapist maintains strict confidentiality of the feelings, thoughts, actions and experiences disclosed by the client. The therapist must not betray the trust of the client or exploit them in any way. It is a professional relationship, and must remain so.

SubQuestion No : 18

Q.18 Which of these phrases best describes empathy?

- Ans
- ☒ 1. Feeling sorry for other's misfortune
  - ☒ 2. Venting pent up emotions
  - ☒ 3. Putting oneself in other's shoes
  - ☒ 4. Taking pity on others

Question ID : 497959564

Comprehension:



The special relationship between the client and the therapist is known as a therapeutic relationship or alliance. It is neither a passing acquaintance, nor a permanent relationship. The two major components of this alliance are the contractual nature and the limited duration of the therapy. The client and the therapist willingly enter into an alliance with the purpose of helping the client overcome their problems. The alliance lasts till the client is able to deal with the problems and take control of their life. It is a relationship based on mutual trust and confidence. A high level of trust is essential to enable the client to vent out their feelings openly and unburden themselves by confiding about their psychological and personal problems to the therapist. The therapist encourages this by being empathetic, genuine, warm and understanding. The therapist ensures the client that they would not be judging them and would continue to have positive feelings towards them even if the client is rude or shares deeds or thoughts that may be 'wrong'. This is the unconditional positive regard that the therapist has for the client.

It is very important that the therapist should have empathy for the client and not sympathy or an intellectual understanding of the other person's situation. In case of sympathy, the person feels pity for the other's suffering but cannot feel like the other person. Intellectual understanding is cold and rational and does not evoke feelings of either compassion or empathy. On the other hand, empathy makes one understand the plight of another and see oneself in the other's shoes. It enables one to see things from the other's perspective. Thus, empathy enriches the therapeutic relationship and transforms it into a healing relationship.

The therapeutic relationship also requires that the therapist maintains strict confidentiality of the feelings, thoughts, actions and experiences disclosed by the client. The therapist must not betray the trust of the client or exploit them in any way. It is a professional relationship, and must remain so.

SubQuestion No : 19

Q.19 Why is the client-therapist relationship contractual in nature?

- Ans
- ☒ 1. It is a willing alliance with a common motive.
  - ☐ 2. It is based on mutual trust and is irrevocable.
  - ☐ 3. It is legally binding on both parties.
  - ☐ 4. It is temporary and arises out of compassion.

Question ID : 497959561

Comprehension:

The special relationship between the client and the therapist is known as a therapeutic relationship or alliance. It is neither a passing acquaintance, nor a permanent relationship. The two major components of this alliance are the contractual nature and the limited duration of the therapy. The client and the therapist willingly enter into an alliance with the purpose of helping the client overcome their problems. The alliance lasts till the client is able to deal with the problems and take control of their life. It is a relationship based on mutual trust and confidence. A high level of trust is essential to enable the client to vent out their feelings openly and unburden themselves by confiding about their psychological and personal problems to the therapist. The therapist encourages this by being empathetic, genuine, warm and understanding. The therapist ensures the client that they would not be judging them and would continue to have positive feelings towards them even if the client is rude or shares deeds or thoughts that may be 'wrong'. This is the unconditional positive regard that the therapist has for the client.

It is very important that the therapist should have empathy for the client and not sympathy or an intellectual understanding of the other person's situation. In case of sympathy, the person feels pity for the other's suffering but cannot feel like the other person. Intellectual understanding is cold and rational and does not evoke feelings of either compassion or empathy. On the other hand, empathy makes one understand the plight of another and see oneself in the other's shoes. It enables one to see things from the other's perspective. Thus, empathy enriches the therapeutic relationship and transforms it into a healing relationship.

The therapeutic relationship also requires that the therapist maintains strict confidentiality of the feelings, thoughts, actions and experiences disclosed by the client. The therapist must not betray the trust of the client or exploit them in any way. It is a professional relationship, and must remain so.

SubQuestion No : 20

Q.20 What attitude of the therapist could be detrimental to the therapeutic relationship?

- Ans
- ✓ 1. Being judgemental
  - ✗ 2. Being discreet
  - ✗ 3. Being empathetic
  - ✗ 4. Being professional

Question ID : 497959563

Section : General Hindi1

Comprehension:



नीचे दिये गए गद्यांश को पढ़कर पूछे गये प्रश्नों के उत्तर दीजिए।  
मनुष्य शारीरिक कष्ट से ही पीछे हटने वाला प्राणी नहीं है। मानसिक क्लेश की संभावना से भी बहुत-से कर्मों की ओर प्रवृत्त होने का साहस उसे नहीं होता। जिन बातों से समाज के बीच उपहास, निंदा, अपमान इत्यादि का भय रहता है, उन्हें अच्छी और कल्याणकारी समझते हुए भी बहुत से लोग उनसे दूर रहते हैं। प्रत्यक्ष हानि देखते हुए भी कुछ प्रथाओं का अनुसरण बड़े-बड़े समझदार तक इसलिए करते चलते हैं कि उनके त्याग से वे बुरे कहे जाएँगे; लोगों में उनका वैसा आदर-सम्मान न रह जाएगा। उसके लिए मान-ग्लानि का कष्ट सब शारीरिक क्लेशों से बढ़कर होता है। जो लोग मान-अपमान का कुछ भी ध्यान न करके निंदा-स्तुति की कुछ भी परवाह न करके किसी कुप्रथा के विरुद्ध पूर्ण तत्परता और प्रसन्नता के साथ कार्य करते जाते हैं, वे उत्साही और वीर कहलाते हैं।

SubQuestion No : 1

Q.1 गद्यांश में उपहास का आशय है:

- Ans
- ✓ 1. खिल्ली
  - ✗ 2. हास्य
  - ✗ 3. सम्मान
  - ✗ 4. प्रशंसा

Question ID : 497959568

Comprehension:

नीचे दिये गए गद्यांश को पढ़कर पूछे गये प्रश्नों के उत्तर दीजिए।  
मनुष्य शारीरिक कष्ट से ही पीछे हटने वाला प्राणी नहीं है। मानसिक क्लेश की संभावना से भी बहुत-से कर्मों की ओर प्रवृत्त होने का साहस उसे नहीं होता। जिन बातों से समाज के बीच उपहास, निंदा, अपमान इत्यादि का भय रहता है, उन्हें अच्छी और कल्याणकारी समझते हुए भी बहुत से लोग उनसे दूर रहते हैं। प्रत्यक्ष हानि देखते हुए भी कुछ प्रथाओं का अनुसरण बड़े-बड़े समझदार तक इसलिए करते चलते हैं कि उनके त्याग से वे बुरे कहे जाएँगे; लोगों में उनका वैसा आदर-सम्मान न रह जाएगा। उसके लिए मान-ग्लानि का कष्ट सब शारीरिक क्लेशों से बढ़कर होता है। जो लोग मान-अपमान का कुछ भी ध्यान न करके निंदा-स्तुति की कुछ भी परवाह न करके किसी कुप्रथा के विरुद्ध पूर्ण तत्परता और प्रसन्नता के साथ कार्य करते जाते हैं, वे उत्साही और वीर कहलाते हैं।

SubQuestion No : 2

Q.2 'स्तुति' का अर्थ है:

- Ans
- ✓ 1. प्रशंसा
  - ✗ 2. सम्मान



✗ 3. अपमान

✗ 4. घृणा

Question ID : 497959571

Comprehension:

नीचे दिये गए गद्यांश को पढ़कर पूछे गये प्रश्नों के उत्तर दीजिए।  
मनुष्य शारीरिक कष्ट से ही पीछे हटने वाला प्राणी नहीं है। मानसिक क्लेश की संभावना से भी बहुत-से कर्मों की ओर प्रवृत्त होने का साहस उसे नहीं होता। जिन बातों से समाज के बीच उपहास, निंदा, अपमान इत्यादि का भय रहता है, उन्हें अच्छी और कल्याणकारी समझते हुए भी बहुत से लोग उनसे दूर रहते हैं। प्रत्यक्ष हानि देखते हुए भी कुछ प्रथाओं का अनुसरण बड़े-बड़े समझदार तक इसलिए करते चलते हैं कि उनके त्याग से वे बुरे कहे जाएँगे; लोगों में उनका वैसा आदर-सम्मान न रह जाएगा। उसके लिए मान-ग्लानि का कष्ट सब शारीरिक क्लेशों से बढ़कर होता है। जो लोग मान-अपमान का कुछ भी ध्यान न करके निंदा-स्तुति की कुछ भी परवाह न करके किसी कुप्रथा के विरुद्ध पूर्ण तत्परता और प्रसन्नता के साथ कार्य करते जाते हैं, वे उत्साही और वीर कहलाते हैं।

SubQuestion No : 3

Q.3 'प्रत्यक्ष' का अर्थ है:

Ans ✗ 1. अस्पष्ट

✗ 2. जटिल

✓ 3. स्पष्ट

✗ 4. सरल

Question ID : 497959569

Comprehension:

नीचे दिये गए गद्यांश को पढ़कर पूछे गये प्रश्नों के उत्तर दीजिए।  
मनुष्य शारीरिक कष्ट से ही पीछे हटने वाला प्राणी नहीं है। मानसिक क्लेश की संभावना से भी बहुत-से कर्मों की ओर प्रवृत्त होने का साहस उसे नहीं होता। जिन बातों से समाज के बीच उपहास, निंदा, अपमान इत्यादि का भय रहता है, उन्हें अच्छी और कल्याणकारी समझते हुए भी बहुत से लोग उनसे दूर रहते हैं। प्रत्यक्ष हानि देखते हुए भी कुछ प्रथाओं का अनुसरण बड़े-बड़े समझदार तक इसलिए करते चलते हैं कि उनके त्याग से वे बुरे कहे जाएँगे; लोगों में उनका वैसा आदर-सम्मान न रह जाएगा। उसके लिए मान-ग्लानि का कष्ट सब शारीरिक क्लेशों से बढ़कर होता है। जो लोग मान-अपमान का कुछ भी ध्यान न करके निंदा-स्तुति की कुछ भी परवाह न करके किसी कुप्रथा के विरुद्ध पूर्ण तत्परता और प्रसन्नता के साथ कार्य करते जाते हैं, वे उत्साही और वीर कहलाते हैं।

SubQuestion No : 4

Q.4 गद्यांश में प्रयुक्त 'मान-ग्लानि' से आशय है:

- Ans
- ☒ 1. सुख
  - ☒ 2. सम्मान
  - ☒ 3. दुख
  - ☒ 4. अपमान

Question ID : 497959570

Comprehension:

नीचे दिये गए गद्यांश को पढ़कर पूछे गये प्रश्नों के उत्तर दीजिए।  
मनुष्य शारीरिक कष्ट से ही पीछे हटने वाला प्राणी नहीं है। मानसिक क्लेश की संभावना से भी बहुत-से कर्मों की ओर प्रवृत्त होने का साहस उसे नहीं होता। जिन बातों से समाज के बीच उपहास, निंदा, अपमान इत्यादि का भय रहता है, उन्हें अच्छी और कल्याणकारी समझते हुए भी बहुत से लोग उनसे दूर रहते हैं। प्रत्यक्ष हानि देखते हुए भी कुछ प्रथाओं का अनुसरण बड़े-बड़े समझदार तक इसलिए करते चलते हैं कि उनके त्याग से वे बुरे कहे जाएँगे; लोगों में उनका वैसा आदर-सम्मान न रह जाएगा। उसके लिए मान-ग्लानि का कष्ट सब शारीरिक क्लेशों से बढ़कर होता है। जो लोग मान-अपमान का कुछ भी ध्यान न करके निंदा-स्तुति की कुछ भी परवाह न करके किसी कुप्रथा के विरुद्ध पूर्ण तत्परता और प्रसन्नता के साथ कार्य करते जाते हैं, वे उत्साही और वीर कहलाते हैं।

SubQuestion No : 5

Q.5 'क्लेश' का अर्थ होता है:

- Ans
- ☒ 1. सुख
  - ☒ 2. उत्साह
  - ☒ 3. आलस्य
  - ☒ 4. दुःख

Question ID : 497959567

Q.6 निम्न में से किस शब्द की वर्तनी शुद्ध है?

- Ans
- ☒ 1. अभ्यन्तरिक
  - ☒ 2. सुसुप्ति
  - ☒ 3. हितैषी
  - ☒ 4. समाज्य

Question ID : 497959578

Q.7 निम्न में से कौन सा शब्द तत्सम है?

- Ans
- ☒ 1. पत्थर
  - ☒ 2. पंख
  - ☒ 3. पक्षी
  - ☒ 4. पलंग

Question ID : 497959574

Q.8 निम्न में से कौन सा शब्द तद्भव है?

- Ans
- ☒ 1. दमन
  - ☒ 2. नग्न
  - ☒ 3. धान
  - ☒ 4. स्थान

Question ID : 497959572

Q.9 निम्न में से कौन सा समुच्चयबोधक अव्यय नहीं है?

- Ans
- ☒ 1. भी
  - ☒ 2. पर
  - ☒ 3. अरे!
  - ☒ 4. और

Question ID : 497959586

Q.10 निम्न में से देशज शब्द कौन सा है?

- Ans
- ☒ 1. खयाल
  - ☒ 2. खबर
  - ☒ 3. खिड़की
  - ☒ 4. खत

Question ID : 497959576

Q.11 'खग' का अर्थ नहीं होता:

- Ans
- ☒ 1. बाण
  - ☒ 2. तारा
  - ☒ 3. पक्षी
  - ☒ 4. आकाश

Question ID : 497959580

Q.12 निम्न में से प्रेरणार्थक क्रिया कौन सी है?

- Ans
- ☐ 1. जागना
  - ☐ 2. कहना
  - ☐ 3. दिखना
  - ☒ 4. सुखाना

Question ID : 497959585

Q.13 'टिकाऊ' किस प्रकार का विशेषण है?

- Ans
- ☐ 1. संख्यावाचक
  - ☐ 2. सार्वनामिक
  - ☒ 3. गुणवाचक
  - ☐ 4. परिमाणबोधक

Question ID : 497959584

Q.14 निम्न में से कौन सा शब्द तत्सम नहीं है?

- Ans
- ☐ 1. वानर
  - ☐ 2. फाल्गुन
  - ☒ 3. फूल
  - ☐ 4. वत्स

Question ID : 497959575

Q.15 निम्न में से विदेशी शब्द कौन सा है?

- Ans
- ☒ 1. टिकट
  - ☐ 2. लोटा
  - ☐ 3. चिड़िया
  - ☐ 4. पगड़ी

Question ID : 497959577

Q.16 निम्न में से निजवाचक सर्वनाम कौन सा है?

- Ans
- ☐ 1. तू
  - ☒ 2. आप
  - ☐ 3. मैं
  - ☐ 4. वह



Question ID : 497959583

Q.17 निम्न में से कौन सा शब्द तद्रव नहीं है?

- Ans
- ☒ 1. दूब
  - ☒ 2. धीरज
  - ☒ 3. दीपक
  - ☒ 4. दही

Question ID : 497959573

Q.18 'जो जाना जा सके' अर्थ के लिए एक शब्द होगा:

- Ans
- ☒ 1. ज्ञेय
  - ☒ 2. ज्ञापन
  - ☒ 3. अज्ञेय
  - ☒ 4. ज्ञापक

Question ID : 497959581

Q.19 'बड़प्पन' किस प्रकार की संज्ञा है?

- Ans
- ☒ 1. भाववाचक
  - ☒ 2. जातिवाचक
  - ☒ 3. व्यक्तिवाचक
  - ☒ 4. पदार्थवाचक

Question ID : 497959582

Q.20 'आदि-आदी' शब्द-युग्म का सही अर्थ है:

- Ans
- ☒ 1. अभ्यस्त, अदरक
  - ☒ 2. आरम्भ, अभ्यस्त
  - ☒ 3. आरम्भ, इत्यादि
  - ☒ 4. अभ्यस्त, आरम्भ

Question ID : 497959579

Section : General Hindi2

Q.1 'मनुष्य को क्षुब्ध नहीं होना चाहिए।' वाक्य के रेखांकित शब्द का विलोम होगा:

- Ans
- ☒ 1. खुश



✓ 2. शांत

✗ 3. क्रुद्ध

✗ 4. दुखी

Question ID : 497959606

Q.2 'अन्विति' का विलोम होगा:

Ans

✗ 1. इति

✓ 2. अनन्विति

✗ 3. श्रुति

✗ 4. अनन्वित

Question ID : 497959604

Q.3 'श्याम ने कहा कि मैं पढ़ूँगा।' वाक्य में 'मैं पढ़ूँगा' किस प्रकार का उपवाक्य है?

Ans

✗ 1. विशेषण उपवाक्य

✗ 2. सर्वनाम उपवाक्य

✗ 3. क्रियाविशेषण उपवाक्य

✓ 4. संज्ञा उपवाक्य

Question ID : 497959593

Q.4 'अल्पायु' का विलोम होगा:

Ans

✗ 1. अमर

✗ 2. जटायु

✗ 3. अजर

✓ 4. दीर्घायु

Question ID : 497959605

Q.5 'करकमल' में कर का अर्थ है:

Ans

✗ 1. हाथी

✓ 2. हाथ

✗ 3. किरण

✗ 4. टैक्स

Question ID : 497959603

Q.6 रचना के अनुसार कौन सा वाक्य का प्रकार नहीं है?

- Ans
- ☒ 1. संयुक्त वाक्य
  - ☒ 2. कुटिल वाक्य
  - ☒ 3. मिश्र वाक्य
  - ☒ 4. सरल वाक्य

Question ID : 497959594

Q.7 'तुम पढ़ो' किस प्रकार का वाक्य है?

- Ans
- ☒ 1. संकेतवाचक
  - ☒ 2. विस्मयवाचक
  - ☒ 3. संदेहवाचक
  - ☒ 4. आज्ञावाचक

Question ID : 497959596

Q.8 'अतः + एव' का संधि-रूप होगा:

- Ans
- ☒ 1. अतैव
  - ☒ 2. अताएव
  - ☒ 3. अतएव
  - ☒ 4. अतिएव

Question ID : 497959587

Q.9 अन्वय की दृष्टि से कौन सा वाक्य शुद्ध है?

- Ans
- ☒ 1. माता-पिता बैठे है।
  - ☒ 2. माता-पिता बैठी है।
  - ☒ 3. माता-पिता बैठा है।
  - ☒ 4. माता-पिता बैठे हैं।

Question ID : 497959598

Q.10 'मछली' का पर्यायवाची नहीं है:

- Ans
- ☒ 1. गिरा
  - ☒ 2. सफरी
  - ☒ 3. झख

✗ 4. मीन

Question ID : 497959601

Q.11 'लौटकर कहने लगा' किस पदबन्ध का उदाहरण है?

- Ans
- ✓ 1. क्रिया पदबन्ध
  - ✗ 2. संज्ञा पदबन्ध
  - ✗ 3. सर्वनाम पदबन्ध
  - ✗ 4. विशेषण पदबन्ध

Question ID : 497959592

Q.12 'अधिकार' में किस उपसर्ग का प्रयोग हुआ है?

- Ans
- ✗ 1. कर
  - ✓ 2. अधि
  - ✗ 3. कार
  - ✗ 4. अ

Question ID : 497959589

Q.13 'मैं आया और वह गया।' किस प्रकार का वाक्य है?

- Ans
- ✗ 1. उपवाक्य
  - ✓ 2. संयुक्त वाक्य
  - ✗ 3. सरल वाक्य
  - ✗ 4. मिश्र वाक्य

Question ID : 497959595

Q.14 पदक्रम की दृष्टि से कौन सा वाक्य शुद्ध है?

- Ans
- ✗ 1. भोजन गीता ने किया।
  - ✗ 2. गीता ने किया भोजन।
  - ✗ 3. भोजन किया गीता ने।
  - ✓ 4. गीता ने भोजन किया।

Question ID : 497959597

Q.15 'कृशानु' किसका पर्यायवाची है?

- Ans
- ✗ 1. अश्व
  - ✓ 2. अग्नि

- ✗ 3. किरण  
✗ 4. असुर

Question ID : 497959599

Q.16 'आँख' का पर्यायवाची है:

- Ans  
✗ 1. मयूख  
✗ 2. निलय  
✗ 3. आशुग  
✓ 4. अम्बक

Question ID : 497959600

Q.17 'तनुज' किसका पर्यायवाची है?

- Ans  
✗ 1. पिता  
✓ 2. पुत्र  
✗ 3. भ्राता  
✗ 4. मित्र

Question ID : 497959602

Q.18 'प्रतिमान' में कौन सा समास है?

- Ans  
✗ 1. द्विगु  
✗ 2. तत्पुरुष  
✓ 3. अव्ययीभाव  
✗ 4. द्वन्द्व

Question ID : 497959588

Q.19 निम्न में से कौन सा शब्द स्त्रीलिंग है?

- Ans  
✗ 1. उपवास  
✓ 2. उपासना  
✗ 3. उत्साह  
✗ 4. उपकरण

Question ID : 497959591

Q.20 'पुष्पित' में किस प्रत्यय का प्रयोग हुआ है?

Ans

- ✗ 1. त  
✓ 2. इत  
✗ 3. पु  
✗ 4. पित

Question ID : 497959590

