

DSSSB Librarian

Previous Year Paper
10 July, 2023 Shift 3



Adda247

Test Prime

ALL EXAMS, ONE SUBSCRIPTION



80,000+
Mock Tests



**Personalised
Report Card**



**Unlimited
Re-Attempt**



600+
Exam Covered



20,000+ Previous
Year Papers



500%
Refund



ATTEMPT FREE MOCK NOW



GOVT. OF NCT OF DELHI
 Delhi Subordinate Services Selection Board
 FC-18, Institutional Area, Karkardooma, Delhi – 110092.
www.dsssb.delhigovt.nic.in

Participant ID	
Participant Name	
Test Center Name	
Test Date	10/07/2023
Test Time	4:30 PM - 6:30 PM
Subject	Librarian

Section : General intelligence and Reasoning Ability

Q.1 Select the term from among the given options that can replace the question mark (?) in the following series.

C-18 ,D-48, E-100, F-180, ?

- Ans

✗ 1. G-296

✗ 2. G-295

✓ 3. G-294

✗ 4. G-297

Question ID : 630680267211
 Option 1 ID : 6306801038240
 Option 2 ID : 6306801038239
 Option 3 ID : 6306801038241
 Option 4 ID : 6306801038242

Q.2 Ram is in the 17th position from the left while Laxman is in the 26th position from the right end. If they interchange the position, then Laxman is in the 56th position from the right end. How many people are sitting in the row?

- Ans

✗ 1. 71

✓ 2. 72

✗ 3. 74

✗ 4. 73

Question ID : 630680267207
 Option 1 ID : 6306801038223
 Option 2 ID : 6306801038225
 Option 3 ID : 6306801038226
 Option 4 ID : 6306801038224

Q.3 If the first half of the English alphabet series is written in reverse order and there is no change in the second half of the series, then which letter is 18th to the left of the letter which is 25th from the left end?

- Ans

✗ 1. H

✗ 2. T

✓ 3. G

✗ 4. F

Question ID : 630680267214
 Option 1 ID : 6306801038253
 Option 2 ID : 6306801038251
 Option 3 ID : 6306801038254
 Option 4 ID : 6306801038252

Q.4 7 students Shaz, Kamlesh, Rajesh, Yogesh, Rahul, Ramesh and Rohit are sitting in a row facing South such that

- All students whose name started with R always sitting together and not at any extreme end.
- Yogesh is sitting immediate left of Rohit and never sitting at any extreme end.
- Rajesh is sitting between Rahul and Ramesh.
- Rahul is sitting immediate left of Shaz.

Who is sitting in the middle of row?

- Ans
- ☒ 1. Ramesh
 - ☐ 2. Rahul
 - ☐ 3. Rajesh
 - ☐ 4. Rohit

Question ID : 630680267206
Option 1 ID : 6306801038221
Option 2 ID : 6306801038219
Option 3 ID : 6306801038220
Option 4 ID : 6306801038222

Q.5 If X # Y means 'Y is the brother of X',
X @ Y means 'X is the sister of Y',
X & Y means 'X is the father of Y'.
How is P related to M in the given relation "M&N@O#P?"

- Ans
- ☐ 1. P is the daughter of M.
 - ☐ 2. P is the daughter-in-law of M.
 - ☒ 3. P is the son of M.
 - ☐ 4. P is the son-in-law of M.

Question ID : 630680267215
Option 1 ID : 6306801038256
Option 2 ID : 6306801038255
Option 3 ID : 6306801038257
Option 4 ID : 6306801038258

Q.6 In a north-facing row of Picture Hall, Jasmine is 19th from the left end and Rose is 22nd from the right end. There are 5 persons between Jasmine and Joseph which is equal to the number of persons between Joseph and Rose. How many persons are there in the row of a picture Hall?

- Ans
- ☐ 1. 53
 - ☐ 2. 54
 - ☒ 3. 52
 - ☐ 4. 51

Question ID : 630680267208
Option 1 ID : 6306801038230
Option 2 ID : 6306801038227
Option 3 ID : 6306801038228
Option 4 ID : 6306801038229

Q.7 In the English alphabet letters at 1st & 2nd, 3rd & 4th, 5th & 6th, and so on interchange the position then, which letter is 7th to the left of the letter which is 18th from the left end?

- Ans** ☒ 1. K
☒ 2. L
☒ 3. M
☒ 4. N

Question ID : 630680267213
 Option 1 ID : 6306801038247
 Option 2 ID : 6306801038248
 Option 3 ID : 6306801038249
 Option 4 ID : 6306801038250

Q.8 What approximate value should come in place of the question mark (?) in the following equation?

$$91.23 \div 7.17 - 129.69 + 33.29 \times 17.37 = ?$$

- Ans** ☒ 1. 245
☒ 2. 378
☒ 3. 478
☒ 4. 444

Question ID : 630680267225
 Option 1 ID : 6306801038298
 Option 2 ID : 6306801038297
 Option 3 ID : 6306801038296
 Option 4 ID : 6306801038295

Q.9 Four letter-cluster pairs have been given, out of which three are alike in some manner and one is different. Select the one that is different.

- Ans** ☒ 1. DATABASE : YZHVWZGZ
☒ 2. ACADEMIC : VNRXZXZW
☒ 3. BIRTHDAY : SWZBYRIG
☒ 4. CONFLICT : XLMUORXG

Question ID : 630680267218
 Option 1 ID : 6306801038270
 Option 2 ID : 6306801038267
 Option 3 ID : 6306801038268
 Option 4 ID : 6306801038269

Q.10 Select the correct combination of mathematical signs that can sequentially replace the * signs and balance the given equation.
 $65 * 323 * 19 * 23 * 79 * 377$

- Ans** ☒ 1. $\times, \div, +, -, =$
☒ 2. $\div, +, \times, -, =$
☒ 3. $-, \div, +, \times, =$
☒ 4. $+, \div, \times, -, =$

Question ID : 630680267224
 Option 1 ID : 6306801038294
 Option 2 ID : 6306801038291
 Option 3 ID : 6306801038292
 Option 4 ID : 6306801038293

Q.11 Select the letter-cluster from among the given options that can replace the question mark (?) in the following series.

ADVENT, BDVENS, BEVEMS, ?

- Ans
- ☒ 1. BEUDMS
 - ☒ 2. BEWFMS
 - ☒ 3. BEWDMS
 - ☒ 4. BEUFMS

Question ID : 630680267212
Option 1 ID : 6306801038245
Option 2 ID : 6306801038244
Option 3 ID : 6306801038246
Option 4 ID : 6306801038243

Q.12 Read the given statement and conclusions carefully. Assuming that the information given in the statements is true, even if it appears to be at variance with commonly known facts, decide which of the given conclusions logically follow(s) from the statement.

Statement :

Many rich people are intelligent and educated.

Conclusion :

- I. All educated persons are rich.
- II. All educated people are intelligent.

- Ans
- ☒ 1. Only conclusion II follows.
 - ☒ 2. Neither conclusion I nor II follows.
 - ☒ 3. Both conclusions I and II follow.
 - ☒ 4. Only conclusion I follows.

Question ID : 630680267219
Option 1 ID : 6306801038272
Option 2 ID : 6306801038273
Option 3 ID : 6306801038274
Option 4 ID : 6306801038271

Q.13 A question is given, followed by two statements labelled I and II. Identify which of the statements is/are sufficient/necessary to answer the question.

Question: How is Kunal related to Devika?

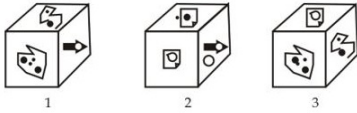
Statements:

- I. Devendra is son of Dev and father of Devika,.
- II. Kunal is son of Devendra and brother of Anu.

- Ans
- ☒ 1. The data in statement I alone are sufficient to answer the question, while the data in statement II alone are not sufficient to answer the question.
 - ☒ 2. The data in statement II alone are sufficient to answer the question, while the data in statement I alone are not sufficient to answer the question.
 - ☒ 3. The data either in statement I alone or in statement II alone are sufficient to answer the question.
 - ☒ 4. Both statements I and II are necessary to answer the question.

Question ID : 630680267216
Option 1 ID : 6306801038259
Option 2 ID : 6306801038260
Option 3 ID : 6306801038261
Option 4 ID : 6306801038262

Q.14 Three different positions of the same dice are shown. Select the pattern that will be on the face opposite to the one having 1.



Ans

✗ 1. Either 4 or 2

✗ 2. Either 3 or 4

✗ 3. Either 2 or 3

✓ 4. Either 3 or 4

Question ID : 630680267222
Option 1 ID : 6306801038285
Option 2 ID : 6306801038283
Option 3 ID : 6306801038286
Option 4 ID : 6306801038284

Q.15 Select the number from among the given options that can replace the question mark (?) in the following series.

3, 6, 18, 66, 258, ?

Ans

✗ 1. 1025

✗ 2. 1024

✓ 3. 1026

✗ 4. 1027

Question ID : 630680267223
Option 1 ID : 6306801038287
Option 2 ID : 6306801038289
Option 3 ID : 6306801038288
Option 4 ID : 6306801038290

Q.16 What will be the mirror image of the following figure?



Ans



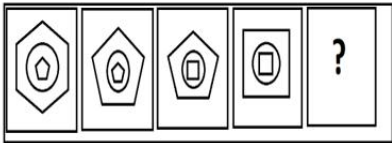
Question ID : 630680267221
Option 1 ID : 6306801038280
Option 2 ID : 6306801038279
Option 3 ID : 6306801038282
Option 4 ID : 6306801038281

Q.17 There are seven persons A, B, C, D, E, F and G, all studying in different classes with each having a different height. C is taller than B and A. G is shorter than A and D. C is shorter than E and F. D is between A and B. E is shorter than F. Whose height is in the middle of all?

- Ans
- ✗ 1. E
 - ✓ 2. B
 - ✗ 3. C
 - ✗ 4. F

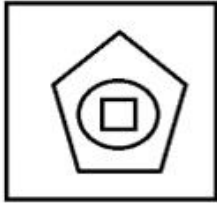
Question ID : 630680267210
Option 1 ID : 6306801038236
Option 2 ID : 6306801038235
Option 3 ID : 6306801038238
Option 4 ID : 6306801038237

Q.18 Select the figure from among the given options that can replace the question mark (?) in the following series.



Ans

✗ 1.



✗ 2.



✓ 3.



✗ 4.



Question ID : 630680267220
Option 1 ID : 6306801038278
Option 2 ID : 6306801038275
Option 3 ID : 6306801038276
Option 4 ID : 6306801038277

Q.19 Read the given statements and conclusions carefully. Assuming that the information given in the statements is true, even if it appears to be at variance with commonly known facts, decide which of the given conclusions logically follow(s) from the statements.

Statements:

- A. All jungles are trees.
- B. All lions are trees.
- C. All trees are umbrellas.

Conclusions:

- I. Some jungles are lions.
- II. Some lions are jungles.
- III. No jungles are umbrellas.

- Ans**
- ☒ 1. Both conclusions II and III follow.
 - ☒ 2. Both conclusion I and II follows.
 - ☒ 3. All conclusions I, II and III do not follow.
 - ☒ 4. Only conclusions I follows.

Question ID : 630680267209
Option 1 ID : 6306801038232
Option 2 ID : 6306801038234
Option 3 ID : 6306801038233
Option 4 ID : 6306801038231

Q.20 Select the term from among the given options that can replace the question mark (?) in the following series.

RAHUL : OFSZI :: SACHIN : ?

- Ans**
- ☒ 1. MSRZXH
 - ☒ 2. MRSXZH
 - ☒ 3. MRSZXH
 - ☒ 4. MSRXZH

Question ID : 630680267217
Option 1 ID : 6306801038265
Option 2 ID : 6306801038263
Option 3 ID : 6306801038266
Option 4 ID : 6306801038264

Section : General Awareness

Q.1 Which of the following leaders established 'Group of Forty' (Turkan-i-Chahalgani), the line of Turkish amirs (nobles) who advised and helped the Sultan in administering the Sultanate?

- Ans**
- ☒ 1. Iltutmish
 - ☒ 2. Balban
 - ☒ 3. Nasiruddin Mahmud
 - ☒ 4. Qutbuddin Aibak

Question ID : 630680267229
Option 1 ID : 6306801038312
Option 2 ID : 6306801038313
Option 3 ID : 6306801038314
Option 4 ID : 6306801038311

Q.2 India's only active volcano is found on _____ in Andaman and Nicobar group of Islands.

- Ans ☒ 1. Anderson Island
☒ 2. Barren Island
☒ 3. Spike island
☒ 4. North Sentinel island

Question ID : 630680267237
 Option 1 ID : 6306801038346
 Option 2 ID : 6306801038344
 Option 3 ID : 6306801038345
 Option 4 ID : 6306801038343

Q.3 Which of the following is a folk singing style involving narration of tales from the ancient Indian epic Mahabharata?

- Ans ☒ 1. Bhatiali
☒ 2. Lavani
☒ 3. Bhavageete
☒ 4. Pandavani

Question ID : 630680267233
 Option 1 ID : 6306801038328
 Option 2 ID : 6306801038327
 Option 3 ID : 6306801038329
 Option 4 ID : 6306801038330

Q.4 _____ of Mines and Minerals (Development and Regulation) Act, 1957 empowers Central Government to frame rules for the conservation and systematic development of minerals and for the protection of environment by preventing or controlling any pollution which may be caused by prospecting or mining operations.

- Ans ☒ 1. Section 11
☒ 2. Section 17
☒ 3. Section 10
☒ 4. Section 18

Question ID : 630680267238
 Option 1 ID : 6306801038348
 Option 2 ID : 6306801038349
 Option 3 ID : 6306801038347
 Option 4 ID : 6306801038350

Q.5 What is the rank of India as per the climate Change Performance Index (CCPI, 2023) published by German Watch, New Climate Institute and Climate Action Network International based in Germany?

- Ans ☒ 1. 10th
☒ 2. 7th
☒ 3. 9th
☒ 4. 8th

Question ID : 630680267241
 Option 1 ID : 6306801038362
 Option 2 ID : 6306801038359
 Option 3 ID : 6306801038361
 Option 4 ID : 6306801038360

Q.6 Under which article of the constitution of India, special funds are provided by the Union government to the state governments for the development and welfare of tribal groups?

- Ans** ☒ 1. Article 275
☒ 2. Article 330
☒ 3. Article 243
☒ 4. Article 332

Question ID : 630680267244
 Option 1 ID : 6306801038373
 Option 2 ID : 6306801038371
 Option 3 ID : 6306801038374
 Option 4 ID : 6306801038372

Q.7 "A body continues to be in a state of rest or of uniform motion in a straight line unless it is acted upon by a net external force." This is which law in physics?

- Ans** ☒ 1. Law of Conservation of Energy
☒ 2. Newton's first law of motion
☒ 3. Newton's Law of Universal Gravitation.
☒ 4. Newton's second law of motion

Question ID : 630680267242
 Option 1 ID : 6306801038365
 Option 2 ID : 6306801038363
 Option 3 ID : 6306801038366
 Option 4 ID : 6306801038364

Q.8 The Indian Constitution was the lengthiest Constitution at the time of its adoption which originally had _____ Articles.

- Ans** ☒ 1. 444
☒ 2. 395
☒ 3. 348
☒ 4. 448

Question ID : 630680267243
 Option 1 ID : 6306801038367
 Option 2 ID : 6306801038369
 Option 3 ID : 6306801038370
 Option 4 ID : 6306801038368

Q.9 According to the Tribal Development Report 2022, launched by the Bharat Rural Livelihood Foundation, India's tribal communities form _____ percent of the country's population according to the 2011 Census.

- Ans** ☒ 1. 8.5%
☒ 2. 8.4%
☒ 3. 8.6%
☒ 4. 8.7%

Question ID : 630680267239
 Option 1 ID : 6306801038352
 Option 2 ID : 6306801038351
 Option 3 ID : 6306801038353
 Option 4 ID : 6306801038354

Q.10 Amer Fort or Amber Fort is a fort located in which of the following states of India?

- Ans ☒ 1. Rajasthan
☒ 2. Punjab
☒ 3. Madhya Pradesh
☒ 4. Haryana

Question ID : 630680267232
 Option 1 ID : 6306801038326
 Option 2 ID : 6306801038323
 Option 3 ID : 6306801038325
 Option 4 ID : 6306801038324

Q.11 According to the United Nations (UN) World Population Prospects 2022, which of the following countries was the largest contributor to the milestone, having added 177 million people of the last billion people born in the world?

- Ans ☒ 1. China
☒ 2. Bangladesh
☒ 3. Pakistan
☒ 4. India

Question ID : 630680267227
 Option 1 ID : 6306801038303
 Option 2 ID : 6306801038306
 Option 3 ID : 6306801038304
 Option 4 ID : 6306801038305

Q.12 According to the World Bank report, India would need to invest _____ over the next 15 years, that is an average investment of \$55 billion per annum, into urban infrastructure to effectively meet the needs of its fast-growing urban population.

- Ans ☒ 1. \$540 Billion
☒ 2. \$740 billion
☒ 3. \$340 Billion
☒ 4. \$840 billion

Question ID : 630680267236
 Option 1 ID : 6306801038341
 Option 2 ID : 6306801038340
 Option 3 ID : 6306801038342
 Option 4 ID : 6306801038339

Q.13 According to newspaper reports from November-December 2022, India and _____ are manufacturing similar lines of products (Light Armed Helicopter), which has positioned them as competitors in the global export market.

- Ans ☒ 1. South Korea
☒ 2. Malaysia
☒ 3. Japan
☒ 4. Singapore

Question ID : 630680267226
 Option 1 ID : 6306801038302
 Option 2 ID : 6306801038300
 Option 3 ID : 6306801038299
 Option 4 ID : 6306801038301

Q.14 _____ was the first battle of the Anglo-Nepalese War of 1814–1816, fought between the forces of the British East India Company and Nepal, then ruled by the House of Gorkha.

- Ans
- ☐ 1. The Battle of Kathmandu
 - ☐ 2. The Battle of Bhaktapur
 - ☐ 3. The Battle of Sindhuli
 - ☒ 4. The Battle of Nalapani

Question ID : 630680267231
Option 1 ID : 6306801038321
Option 2 ID : 6306801038320
Option 3 ID : 6306801038322
Option 4 ID : 6306801038319

Q.15 As per the Sample Registration System (SRS) Statistical Report 2020 released on 22nd September 2022 by Registrar General of India (RGI), Under 5 Mortality Rate (U5MR) for the country stands at which of the following figures?

- Ans
- ☒ 1. 32/1000 live births in 2020
 - ☐ 2. 34/1000 live births in 2020
 - ☐ 3. 35/1000 live births in 2020
 - ☐ 4. 33/1000 live births in 2020

Question ID : 630680267234
Option 1 ID : 6306801038331
Option 2 ID : 6306801038333
Option 3 ID : 6306801038334
Option 4 ID : 6306801038332

Q.16 Which of the following teams were the winners of the 7th Women's Asia Cup 2022?

- Ans
- ☐ 1. Sri Lanka
 - ☒ 2. India
 - ☐ 3. Bangladesh
 - ☐ 4. Australia

Question ID : 630680267228
Option 1 ID : 6306801038307
Option 2 ID : 6306801038309
Option 3 ID : 6306801038308
Option 4 ID : 6306801038310

Q.17 Which of the following Articles of the Constitution of India provides for the setting up of a Finance Commission by the President every five years?

- Ans
- ☐ 1. Article 290
 - ☒ 2. Article 280
 - ☐ 3. Article 270
 - ☐ 4. Article 250

Question ID : 630680267245
Option 1 ID : 6306801038378
Option 2 ID : 6306801038377
Option 3 ID : 6306801038376
Option 4 ID : 6306801038375

Q.18 The Battle of Plassey in 1757 became famous because it was the first major victory the Company won in India where _____ led the Company's army against Sirajuddaulah at Plassey.

- Ans ☒ 1. Lord William Bentinck
☒ 2. Robert Clive
☒ 3. Lord Hasting
☒ 4. Willaim Watts

Question ID : 630680267230
 Option 1 ID : 6306801038317
 Option 2 ID : 6306801038318
 Option 3 ID : 6306801038316
 Option 4 ID : 6306801038315

Q.19 According to Economic Survey of India report of 2021-22, which sector was least impacted by the pandemic-related disruptions?

- Ans ☒ 1. Constructions
☒ 2. Agricultural Sector
☒ 3. Manufacturing
☒ 4. Mining and Quarrying

Question ID : 630680267235
 Option 1 ID : 6306801038337
 Option 2 ID : 6306801038335
 Option 3 ID : 6306801038338
 Option 4 ID : 6306801038336

Q.20 Which of the following scheme is aimed at ensuring energy security for farmers in India, along with honouring India's commitment to increase the share of installed capacity of electric power from non-fossil-fuel sources to 40% by 2030 as part of Intended Nationally Determined Contributions (INDCs).

- Ans ☒ 1. UJWAL Bharat Yojana
☒ 2. Ujwal DISCOM Assurance Yojana
☒ 3. URJA- PRAGATI
☒ 4. PM-KUSUM

Question ID : 630680267240
 Option 1 ID : 6306801038357
 Option 2 ID : 6306801038355
 Option 3 ID : 6306801038358
 Option 4 ID : 6306801038356

Section : Arithmetical and Numerical Ability

Q.1 The area of a triangular field with sides 78 m, 160 m and 178 m is equal to the area of a rectangular garden whose sides are in the ratio 30 : 13. The perimeter of the rectangular garden is:

- Ans ☒ 1. 172 m
☒ 2. 344 m
☒ 3. 430 m
☒ 4. 258 m

Question ID : 630680267261
 Option 1 ID : 6306801038439
 Option 2 ID : 6306801038441
 Option 3 ID : 6306801038442
 Option 4 ID : 6306801038440

Q.2 The driver of a car moving at 80 km/h locates a bus 120 m ahead of the car going in the same direction. After 50 seconds, the bus is 180 m behind the car. What is the speed (in km/h) of the bus?

- Ans**
- ☒ 1. 57.6
 - ☒ 2. 56
 - ☒ 3. 58.4
 - ☒ 4. 57

Question ID : 630680267258
Option 1 ID : 6306801038428
Option 2 ID : 6306801038427
Option 3 ID : 6306801038430
Option 4 ID : 6306801038429

Q.3 Solutions A, B and C contain acid and water in the ratios 3 : 2, 11 : 4 and 7 : 3, respectively. 3 litres of A, 5 litres of B and 4 litres of C are mixed together in a vessel and 4 litres of water are also added to it. What is the ratio of acid and water in the final solution in the vessel?

- Ans**
- ☒ 1. 8 : 5
 - ☒ 2. 11 : 6
 - ☒ 3. 31 : 29
 - ☒ 4. 32 : 19

Question ID : 630680267249
Option 1 ID : 6306801038394
Option 2 ID : 6306801038393
Option 3 ID : 6306801038391
Option 4 ID : 6306801038392

Q.4 A trader sells an item for ₹666.50, after giving a 14% discount on its marked price. If he does not give any discount, he will earn a profit of 24% on the cost price. What is the cost price (in ₹) of the item?

- Ans**
- ☒ 1. 625
 - ☒ 2. 640
 - ☒ 3. 620
 - ☒ 4. 650

Question ID : 630680267253
Option 1 ID : 6306801038407
Option 2 ID : 6306801038409
Option 3 ID : 6306801038408
Option 4 ID : 6306801038410

Q.5 After giving a discount of 15% on the list price of an article, a shopkeeper sells it for ₹595. The cost price of the article is ₹560. If he sells it at the marked price, then her profit per cent is:

- Ans**
- ☒ 1. 28%
 - ☒ 2. 24%
 - ☒ 3. 25%
 - ☒ 4. 20%

Question ID : 630680267252
Option 1 ID : 6306801038406
Option 2 ID : 6306801038404
Option 3 ID : 6306801038405
Option 4 ID : 6306801038403

Q.6 The price of rice increases from ₹45 per kg to ₹63 per kg. If its consumption is reduced by 20%, then by what per cent does the expenditure on it increase?

- Ans**
- ☒ 1. 18%
 - ☒ 2. 15%
 - ☒ 3. 12%
 - ☒ 4. 10%

Question ID : 630680267250
Option 1 ID : 6306801038398
Option 2 ID : 6306801038397
Option 3 ID : 6306801038396
Option 4 ID : 6306801038395

Q.7 The area of three adjacent faces of a solid metallic cuboid are 750 cm^2 , 1080 cm^2 and 900 cm^2 . It is melted and converted into 8 cubes of the same size. What is the sum of the lateral surface areas of 5 such cubes?

- Ans**
- ☒ 1. 6750 cm^2
 - ☒ 2. 3600 cm^2
 - ☒ 3. 5400 cm^2
 - ☒ 4. 4500 cm^2

Question ID : 630680267263
Option 1 ID : 6306801038450
Option 2 ID : 6306801038447
Option 3 ID : 6306801038448
Option 4 ID : 6306801038449

Q.8 If the five-digit number $688xy$ is divisible by 3, 7 and 11, then what is the value of $(7x - 2y)/(3x + 2y)$?

- Ans**
- ☒ 1. $\frac{4}{23}$
 - ☒ 2. 1
 - ☒ 3. $\frac{1}{5}$
 - ☒ 4. $\frac{3}{2}$

Question ID : 630680267247
Option 1 ID : 6306801038386
Option 2 ID : 6306801038384
Option 3 ID : 6306801038385
Option 4 ID : 6306801038383

Q.9 A man travels the first 90 km at 45 km/h, the next 210 km at 60 km/h and for $4\frac{1}{2}$ hours at x km/h. If his average speed for the whole journey is 61.5 km/h, then what is the value of x ?

- Ans**
- ☒ 1. 70
 - ☒ 2. 65
 - ☒ 3. 75
 - ☒ 4. 64

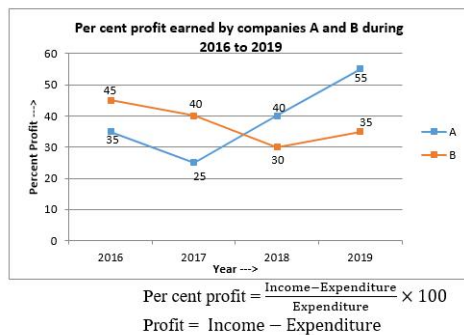
Question ID : 630680267248
Option 1 ID : 6306801038389
Option 2 ID : 6306801038388
Option 3 ID : 6306801038390
Option 4 ID : 6306801038387

Q.10 A train, running at 70 km/h, crosses completely a 320 m long bridge in 27 seconds. How much time (in seconds) will this train take to overtake another 145 m long train running at 50 km/h in the same direction on parallel tracks?

- Ans** ✓ 1. 63
✗ 2. 56
✗ 3. 60
✗ 4. 65

Question ID : 630680267257
Option 1 ID : 6306801038425
Option 2 ID : 6306801038423
Option 3 ID : 6306801038424
Option 4 ID : 6306801038426

Q.11 Study the following graph and answer the question:



In 2019, if the total income of both the companies was ₹267 crores and the ratio of the expenditure of company A to that of B was 2 : 1, then the expenditure (in ₹ crores) of A in that year was:

- Ans** ✗ 1. 100
✗ 2. 90
✗ 3. 150
✓ 4. 120

Question ID : 630680267265
Option 1 ID : 6306801038456
Option 2 ID : 6306801038455
Option 3 ID : 6306801038458
Option 4 ID : 6306801038457

Q.12 A can do a certain work in 40 days. B is $33\frac{1}{3}\%$ more efficient than A. They started to work together and A left after some days. B alone completed the remaining work in 16 days. After how many days did A leave the work?

- Ans** ✗ 1. 6
✗ 2. 7
✗ 3. 9
✓ 4. 8

Question ID : 630680267260
Option 1 ID : 6306801038435
Option 2 ID : 6306801038436
Option 3 ID : 6306801038438
Option 4 ID : 6306801038437

Q.13 The value of $\frac{3}{8} \times \frac{5}{4} \div \frac{5}{16}$ of $\frac{2}{5} + \frac{1}{4} - 7\frac{1}{2} \div 3\frac{3}{4}$ of $\frac{2}{5}$ is:

- Ans
- ☒ 1. 0
 - ☒ 2. 1
 - ☒ 3. 2
 - ☒ 4. -1

Question ID : 630680267246
Option 1 ID : 6306801038379
Option 2 ID : 6306801038381
Option 3 ID : 6306801038382
Option 4 ID : 6306801038380

Q.14 x varies inversely with the product of y and z . When $y = 10$ and $z = 3$, then $x = 4$. If $y = 9$ and $z = 5$, then x is equal to:

- Ans
- ☒ 1. $\frac{5}{2}$
 - ☒ 2. $\frac{8}{3}$
 - ☒ 3. $\frac{10}{9}$
 - ☒ 4. $\frac{9}{4}$

Question ID : 630680267255
Option 1 ID : 6306801038415
Option 2 ID : 6306801038417
Option 3 ID : 6306801038418
Option 4 ID : 6306801038416

Q.15 If Meena sells an article at 68% of its actual selling price, she loses 15%. If she sells it at 5% less than its original selling price, then what is the profit percentage?

- Ans
- ☒ 1. 20%
 - ☒ 2. 18%
 - ☒ 3. 19.25%
 - ☒ 4. 18.75%

Question ID : 630680267251
Option 1 ID : 6306801038402
Option 2 ID : 6306801038399
Option 3 ID : 6306801038401
Option 4 ID : 6306801038400

Q.16 A loan of ₹19,680 is to be paid back in two equal half-yearly instalments. If the interest is charged at 10% p.a., compounded semi-annually, then the value of each instalment is:

- Ans
- ☒ 1. ₹10,604
 - ☒ 2. ₹10,614
 - ☒ 3. ₹10,594
 - ☒ 4. ₹10,584

Question ID : 630680267256
Option 1 ID : 6306801038421
Option 2 ID : 6306801038422
Option 3 ID : 6306801038420
Option 4 ID : 6306801038419

Q.17 A can complete a certain work in 75 days and B can complete the same work in 125 days. A and B work on alternate days, starting with B on the first day. In how many days is the whole work completed?

- Ans
- ☐ 1. $94\frac{1}{3}$
- ☐ 2. $93\frac{3}{4}$
- ☐ 3. $93\frac{2}{5}$
- ☒ 4. $93\frac{4}{5}$

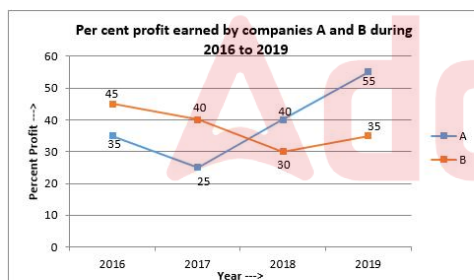
Question ID : 630680267259
Option 1 ID : 6306801038433
Option 2 ID : 6306801038431
Option 3 ID : 6306801038434
Option 4 ID : 6306801038432

Q.18 A sum of ₹5,760 is divided between A, B and C such that the ratio of the share of A to the combined share of B and C is 5 : 11 and the ratio of the share of C to the combined share of A and B is 4 : 5. What is B's share?

- Ans
- ☐ 1. ₹1,500
- ☐ 2. ₹1,350
- ☐ 3. ₹1,450
- ☒ 4. ₹1,400

Question ID : 630680267254
Option 1 ID : 6306801038414
Option 2 ID : 6306801038411
Option 3 ID : 6306801038413
Option 4 ID : 6306801038412

Q.19 Study the following graph and answer the question:



$$\text{Per cent profit} = \frac{\text{Income} - \text{Expenditure}}{\text{Expenditure}} \times 100$$

$$\text{Profit} = \text{Income} - \text{Expenditure}$$

In 2017, the expenditure of company A was ₹240 crores and the income of company B in 2016 was ₹290 crores, then what is the ratio of the income of A in 2017 to the expenditure of B in 2016?

- Ans
- ☐ 1. 29 : 24
- ☐ 2. 2 : 3
- ☒ 3. 3 : 2
- ☐ 4. 24 : 29

Question ID : 630680267264
Option 1 ID : 6306801038453
Option 2 ID : 6306801038452
Option 3 ID : 6306801038451
Option 4 ID : 6306801038454

Q.20 Two solid metallic right circular cones of heights 30 cm and 54 cm and the radius of the base of each of them being 21 cm are melted and recast into a solid sphere. What is the surface area (in cm^2) of the sphere?

- Ans** ☒ 1. 1764π
☒ 2. 1936π
☒ 3. 1600π
☒ 4. 2116π

Question ID : 630680267262
 Option 1 ID : 6306801038444
 Option 2 ID : 6306801038445
 Option 3 ID : 6306801038443
 Option 4 ID : 6306801038446

Section : Test of English Language and Comprehension

Q.1 Select the most appropriate option to fill in the blank.

I want _____ how the people living in the hills do their farming.

- Ans** ☒ 1. know
☒ 2. to know
☒ 3. knew
☒ 4. knowing

Question ID : 630680267269
 Option 1 ID : 6306801038471
 Option 2 ID : 6306801038474
 Option 3 ID : 6306801038472
 Option 4 ID : 6306801038473

Q.2 Given below are four jumbled sentences. Select the option that gives their correct order forming a meaningful and coherent paragraph.

- A. Most workers were employed as labourers in workshops whose owner fixed their wages.
 B. But wages did not keep pace with the rise in prices.
 C. Things became worse whenever drought or hail reduced the harvest.
 D. So the gap between the poor and the rich widened.

- Ans** ☒ 1. ABDC
☒ 2. ACBD
☒ 3. ADCB
☒ 4. ACDB

Question ID : 630680267272
 Option 1 ID : 6306801038485
 Option 2 ID : 6306801038484
 Option 3 ID : 6306801038483
 Option 4 ID : 6306801038486

Q.3 Given below are four jumbled sentences. Select the option that gives their correct order forming a meaningful and coherent paragraph.

- A. The Hodja prayed fervently, but the mountain did not move; he prayed more, but the mountain remained unmoved.
B. Finally the Hodja got up from his knees and began walking toward the mountain. "I am a humble man," he said, "If the mountain will not come to the Hodja, then the Hodja will go to the mountain."
C. The Hodja was boasting about the power of his faith.
D. "If your faith is so strong, then pray for that mountain to come to you," said a skeptic, pointing to a mountain in the distance.

- Ans ☒ 1. CBDA
☒ 2. DACB
☒ 3. CDAB
☒ 4. ADBC

Question ID : 630680267273
Option 1 ID : 6306801038488
Option 2 ID : 6306801038490
Option 3 ID : 6306801038489
Option 4 ID : 6306801038487

Q.4 Select the option that substitutes the underlined word/ segment in the given proverb correctly. If no substitution is required, select 'No substitution required'.

Beauty is the eyes of seer

- Ans ☒ 1. taker
☒ 2. No substitution required
☒ 3. beholder
☒ 4. looker

Question ID : 630680267278
Option 1 ID : 6306801038509
Option 2 ID : 6306801038510
Option 3 ID : 6306801038508
Option 4 ID : 6306801038507

Q.5 Select the most appropriate option to fill in the blanks.

The itinerary comprises the city's _____ iconic landmarks, both natural and manmade, and _____ the best this city has to offer.

- Ans ☒ 1. most ; showcases
☒ 2. more ; showcased
☒ 3. much ; showcase
☒ 4. very ; showcasing

Question ID : 630680267275
Option 1 ID : 6306801038496
Option 2 ID : 6306801038497
Option 3 ID : 6306801038495
Option 4 ID : 6306801038498

Q.6 Select the most appropriate option to fill in the blank.

I shall prefer to stay in this hotel unless you are worried _____ the cost.

- Ans
- ☒

1. against
- ☒

2. about
- ☒

3. to
- ☒

4. for

Question ID : 630680267268

Option 1 ID : 6306801038469

Option 2 ID : 6306801038468

Option 3 ID : 6306801038470

Option 4 ID : 6306801038467

Q.7 Select the option that substitutes the underlined word/ segment in the given idiom correctly. If no substitution is required, select 'No substitution required'.

Take it with a pinch of salt

- Ans
- ☒

1. point of brush
- ☒

2. corner of your eye
- ☒

3. No substitution required
- ☒

4. happy smile

Question ID : 630680267279

Option 1 ID : 6306801038513

Option 2 ID : 6306801038512

Option 3 ID : 6306801038514

Option 4 ID : 6306801038511

Q.8 Select the most appropriate option to fill in the blank.

The pond where he fishes is about _____ mile from the village.

- Ans
- ☒

1. the
- ☒

2. a
- ☒

3. an
- ☒

4. no word required

Question ID : 630680267266

Option 1 ID : 6306801038461

Option 2 ID : 6306801038459

Option 3 ID : 6306801038460

Option 4 ID : 6306801038462

Q.9 Given below are four jumbled sentences. Select the option that gives their correct order forming a meaningful and coherent paragraph.

- A. Recently I was in Moscow, Russia.
B. Russia has won three great wars in its history, which are a source of pride for them.
C. Moscow city has many war memorials.
D. So they have built war memorials and erected many statues of the Generals who were responsible for the victories.

Ans ☒ 1. ABDC
☒ 2. ADCB
☒ 3. ABCD
☒ 4. ACBD

Question ID : 630680267271
Option 1 ID : 6306801038482
Option 2 ID : 6306801038479
Option 3 ID : 6306801038481
Option 4 ID : 6306801038480

Q.10 Select the sentence with the correct adverb in the sentence.

Ans ☒ 1. We have only six apples left with us.
☒ 2. We have rather six apples left with us.
☒ 3. We have quite six apples left with us.
☒ 4. We have fairly six apples left with us.

Question ID : 630680267270
Option 1 ID : 6306801038475
Option 2 ID : 6306801038476
Option 3 ID : 6306801038477
Option 4 ID : 6306801038478

Q.11 Select the most appropriate option to substitute the underlined word in the given sentence. If there is no need to substitute it, select 'no substitution required'.

A group of experts has been constituted for the forthcoming interviews.

Ans ☒ 1. troupe
☒ 2. no substitution required
☒ 3. band
☒ 4. panel

Question ID : 630680267276
Option 1 ID : 6306801038501
Option 2 ID : 6306801038502
Option 3 ID : 6306801038500
Option 4 ID : 6306801038499

Q.12 Select the most appropriate antonym of the given word to fill in the blank.

BLUNT

Be careful. It is a _____ knife.

Ans ☒ 1. sharp
☒ 2. smooth
☒ 3. dull
☒ 4. coarse

Question ID : 630680267280
Option 1 ID : 6306801038516
Option 2 ID : 6306801038515
Option 3 ID : 6306801038518
Option 4 ID : 6306801038517

Q.13 Select the most appropriate option to substitute the underlined word in the given sentence. If there is no need to substitute it, select ‘no substitution required’.

The Petronas Twin Towers are among the most prominent landmarks in Kuala Lumpur.

- Ans
1. hanging

2. flashy

3. bulging

4. no substitution required

Question ID : 630680267277

Option 1 ID : 6306801038504

Option 2 ID : 6306801038505

Option 3 ID : 6306801038503

Option 4 ID : 6306801038506

Q.14 Select the most appropriate option to fill in the blank.

I don't like _____ way in which you are going to carry out your plan.

- Ans
1. the

2. an

3. no word required

4. a

Question ID : 630680267267

Option 1 ID : 6306801038465

Option 2 ID : 6306801038464

Option 3 ID : 6306801038466

Option 4 ID : 6306801038463

Q.15 Select the most appropriate option to fill in the blanks.

Evergreens have long served as symbols of life _____ the bleakness of winter. But Queen Victoria spurred the tradition that has _____ a global phenomenon.

- Ans
1. during ; become

2. across ; gone

3. against ; been

4. about ; turned

Question ID : 630680267274

Option 1 ID : 6306801038491

Option 2 ID : 6306801038492

Option 3 ID : 6306801038493

Option 4 ID : 6306801038494

Comprehension:

Read the following passage and answer the questions given after it.

The rail networks throughout the world were initially developed due to the need to transport goods during the Industrial Revolution, then to fulfill the gradually increasing demand to transport people toward urban centers. As a result, train stations were built to accommodate both passengers and cargo. While some simply served as loading and unloading platforms, others were uniquely designed and eventually recognized as architectural marvels.

The Grand Central Terminal is a New York City landmark. This station was built at the turn of the 20th century and originally served as a long-distance train station before this service was moved to Penn Station in the 1970s. Today, it's a transit station for commuter trains running to and from the suburbs. Nearly 800 trains stop at Grand Central every day. Grand Central Terminal is known for its vaulted ceiling covered in beautiful paintings, and a monumental, four-sided clock placed exactly in the center of the building.

Haydarpaşa Station, Istanbul (Turkey), located on the Asian side of Istanbul, was built in 1906. The neo-renaissance building served as a terminal for trains travelling to eastern Turkey and other Middle Eastern countries. The station is currently closed following a raging fire that destroyed the roof in 2010. The structure retains its charm, however, primarily due to its striking proximity to the Bosphorus strait. The rails seem to run right into the sea.

The Chhatrapati Shivaji Terminus, formerly known as Victoria Terminus Station, in Mumbai, is an outstanding example of the blend of Victorian Gothic architecture and Indian architecture. The building became the symbol of Bombay as the 'Gothic City'. The terminal was built over 10 years, starting in 1878. Its remarkable stone dome, turrets, and pointed arches are close to traditional Indian palace architecture. It is an outstanding example of the meeting of two cultures, as British architects worked with Indian craftsmen to include Indian architectural tradition. It sees 3 million passengers a day and serves as the headquarters of Central Railways..

Kuala Lumpur Station, Malaysia is another mixture of colonial and local architectural styles. Known for its majestic facade, this station resembles typical Victorian buildings with its glass and iron dome, while also featuring Moorish elements drawn from Islamic architecture. Kuala Lumpur Station served trains that passed through the city until 2001. These connections are now made at a new station, Kuala Lumpur Sentral.

SubQuestion No : 16

Q.16 Which railway station is famous for a four-sided clock?

- Ans ☒ 1. The Grand Central Terminal, New York
- ☐ 2. Haydarpaşa Station, Istanbul
- ☐ 3. The Chhatrapati Shivaji Terminus, Mumbai
- ☐ 4. Kuala Lumpur Station, Malaysia

Question ID : 630680267284
Option 1 ID : 6306801038529
Option 2 ID : 6306801038530
Option 3 ID : 6306801038528
Option 4 ID : 6306801038527

Comprehension:

Read the following passage and answer the questions given after it.

The rail networks throughout the world were initially developed due to the need to transport goods during the Industrial Revolution, then to fulfill the gradually increasing demand to transport people toward urban centers. As a result, train stations were built to accommodate both passengers and cargo. While some simply served as loading and unloading platforms, others were uniquely designed and eventually recognized as architectural marvels.

The Grand Central Terminal is a New York City landmark. This station was built at the turn of the 20th century and originally served as a long-distance train station before this service was moved to Penn Station in the 1970s. Today, it's a transit station for commuter trains running to and from the suburbs. Nearly 800 trains stop at Grand Central every day. Grand Central Terminal is known for its vaulted ceiling covered in beautiful paintings, and a monumental, four-sided clock placed exactly in the center of the building.

Haydarpaşa Station, Istanbul (Turkey), located on the Asian side of Istanbul, was built in 1906. The neo-renaissance building served as a terminal for trains travelling to eastern Turkey and other Middle Eastern countries. The station is currently closed following a raging fire that destroyed the roof in 2010. The structure retains its charm, however, primarily due to its striking proximity to the Bosphorus strait. The rails seem to run right into the sea.

The Chhatrapati Shivaji Terminus, formerly known as Victoria Terminus Station, in Mumbai, is an outstanding example of the blend of Victorian Gothic architecture and Indian architecture. The building became the symbol of Bombay as the 'Gothic City'. The terminal was built over 10 years, starting in 1878. Its remarkable stone dome, turrets, and pointed arches are close to traditional Indian palace architecture. It is an outstanding example of the meeting of two cultures, as British architects worked with Indian craftsmen to include Indian architectural tradition. It sees 3 million passengers a day and serves as the headquarters of Central Railways..

Kuala Lumpur Station, Malaysia is another mixture of colonial and local architectural styles. Known for its majestic facade, this station resembles typical Victorian buildings with its glass and iron dome, while also featuring Moorish elements drawn from Islamic architecture. Kuala Lumpur Station served trains that passed through the city until 2001. These connections are now made at a new station, Kuala Lumpur Sentral.

SubQuestion No : 17

Q.17 Match the following stations with their characteristics.

Railway stations	Characteristics
a. Haydarpaşa Station, Istanbul	1. caters to3 million passengers a day
b. Kuala Lumpur Station, Malaysia	2. rails seem to run right into the sea
c. The Chhatrapati Shivaji Terminus, Mumbai	3. mixture of colonial and Islamic architecture

- Ans
- ☒ 1. a-1, b- 3, c-2
 - ☒ 2. a-2, b-1, c-3
 - ☒ 3. a-2, b-3, c-1
 - ☒ 4. a -3, b -1, c-2

Question ID : 630680267285

Option 1 ID : 6306801038533

Option 2 ID : 6306801038534

Option 3 ID : 6306801038531

Option 4 ID : 6306801038532

Comprehension:

Read the following passage and answer the questions given after it.

The rail networks throughout the world were initially developed due to the need to transport goods during the Industrial Revolution, then to fulfill the gradually increasing demand to transport people toward urban centers. As a result, train stations were built to accommodate both passengers and cargo. While some simply served as loading and unloading platforms, others were uniquely designed and eventually recognized as architectural marvels.

The Grand Central Terminal is a New York City landmark. This station was built at the turn of the 20th century and originally served as a long-distance train station before this service was moved to Penn Station in the 1970s. Today, it's a transit station for commuter trains running to and from the suburbs. Nearly 800 trains stop at Grand Central every day. Grand Central Terminal is known for its vaulted ceiling covered in beautiful paintings, and a monumental, four-sided clock placed exactly in the center of the building.

Haydarpaşa Station, Istanbul (Turkey), located on the Asian side of Istanbul, was built in 1906. The neo-renaissance building served as a terminal for trains travelling to eastern Turkey and other Middle Eastern countries. The station is currently closed following a raging fire that destroyed the roof in 2010. The structure retains its charm, however, primarily due to its striking proximity to the Bosphorus strait. The rails seem to run right into the sea.

The Chhatrapati Shivaji Terminus, formerly known as Victoria Terminus Station, in Mumbai, is an outstanding example of the blend of Victorian Gothic architecture and Indian architecture. The building became the symbol of Bombay as the 'Gothic City'. The terminal was built over 10 years, starting in 1878. Its remarkable stone dome, turrets, and pointed arches are close to traditional Indian palace architecture. It is an outstanding example of the meeting of two cultures, as British architects worked with Indian craftsmen to include Indian architectural tradition. It sees 3 million passengers a day and serves as the headquarters of Central Railways..

Kuala Lumpur Station, Malaysia is another mixture of colonial and local architectural styles. Known for its majestic facade, this station resembles typical Victorian buildings with its glass and iron dome, while also featuring Moorish elements drawn from Islamic architecture. Kuala Lumpur Station served trains that passed through the city until 2001. These connections are now made at a new station, Kuala Lumpur Sentral.

SubQuestion No : 18

Q.18 What is the passage mainly about?

- Ans
- ☐ 1. the architecture of railway stations
 - ☐ 2. the origin of railway stations
 - ☒ 3. some railway stations in the world
 - ☐ 4. the capacity of railway stations

Question ID : 630680267283
 Option 1 ID : 6306801038523
 Option 2 ID : 6306801038526
 Option 3 ID : 6306801038524
 Option 4 ID : 6306801038525

Comprehension:

Read the following passage and answer the questions given after it.

The rail networks throughout the world were initially developed due to the need to transport goods during the Industrial Revolution, then to fulfill the gradually increasing demand to transport people toward urban centers. As a result, train stations were built to accommodate both passengers and cargo. While some simply served as loading and unloading platforms, others were uniquely designed and eventually recognized as architectural marvels.

The Grand Central Terminal is a New York City landmark. This station was built at the turn of the 20th century and originally served as a long-distance train station before this service was moved to Penn Station in the 1970s. Today, it's a transit station for commuter trains running to and from the suburbs. Nearly 800 trains stop at Grand Central every day. Grand Central Terminal is known for its vaulted ceiling covered in beautiful paintings, and a monumental, four-sided clock placed exactly in the center of the building.

Haydarpasa Station, Istanbul (Turkey), located on the Asian side of Istanbul, was built in 1906. The neo-renaissance building served as a terminal for trains travelling to eastern Turkey and other Middle Eastern countries. The station is currently closed following a raging fire that destroyed the roof in 2010. The structure retains its charm, however, primarily due to its striking proximity to the Bosphorus strait. The rails seem to run right into the sea.

The Chhatrapati Shivaji Terminus, formerly known as Victoria Terminus Station, in Mumbai, is an outstanding example of the blend of Victorian Gothic architecture and Indian architecture. The building became the symbol of Bombay as the 'Gothic City'. The terminal was built over 10 years, starting in 1878. Its remarkable stone dome, turrets, and pointed arches are close to traditional Indian palace architecture. It is an outstanding example of the meeting of two cultures, as British architects worked with Indian craftsmen to include Indian architectural tradition. It sees 3 million passengers a day and serves as the headquarters of Central Railways..

Kuala Lumpur Station, Malaysia is another mixture of colonial and local architectural styles. Known for its majestic facade, this station resembles typical Victorian buildings with its glass and iron dome, while also featuring Moorish elements drawn from Islamic architecture. Kuala Lumpur Station served trains that passed through the city until 2001. These connections are now made at a new station, Kuala Lumpur Sentral.

SubQuestion No : 19

Q.19 Read the following statements.

- A. The rail networks were developed throughout the world during the Industrial revolution.**
B. During the Industrial Revolution, there was a need to transport goods from one place to another.

Now select the correct option about these statements.

- Ans ☒ 1. Both A and B are true but B is not the correct reason for A.
☒ 2. A is true and B is false.
☒ 3. A is false and B is true.
☒ 4. Both A and B are true and B is the correct reason for A.

Question ID : 630680267286
Option 1 ID : 6306801038538
Option 2 ID : 6306801038535
Option 3 ID : 6306801038536
Option 4 ID : 6306801038537

Comprehension:

Read the following passage and answer the questions given after it.

The rail networks throughout the world were initially developed due to the need to transport goods during the Industrial Revolution, then to fulfill the gradually increasing demand to transport people toward urban centers. As a result, train stations were built to accommodate both passengers and cargo. While some simply served as loading and unloading platforms, others were uniquely designed and eventually recognized as architectural marvels.

The Grand Central Terminal is a New York City landmark. This station was built at the turn of the 20th century and originally served as a long-distance train station before this service was moved to Penn Station in the 1970s. Today, it's a transit station for commuter trains running to and from the suburbs. Nearly 800 trains stop at Grand Central every day. Grand Central Terminal is known for its vaulted ceiling covered in beautiful paintings, and a monumental, four-sided clock placed exactly in the center of the building.

Haydarpaşa Station, Istanbul (Turkey), located on the Asian side of Istanbul, was built in 1906. The neo-renaissance building served as a terminal for trains travelling to eastern Turkey and other Middle Eastern countries. The station is currently closed following a raging fire that destroyed the roof in 2010. The structure retains its charm, however, primarily due to its striking proximity to the Bosphorus strait. The rails seem to run right into the sea.

The Chhatrapati Shivaji Terminus, formerly known as Victoria Terminus Station, in Mumbai, is an outstanding example of the blend of Victorian Gothic architecture and Indian architecture. The building became the symbol of Bombay as the 'Gothic City'. The terminal was built over 10 years, starting in 1878. Its remarkable stone dome, turrets, and pointed arches are close to traditional Indian palace architecture. It is an outstanding example of the meeting of two cultures, as British architects worked with Indian craftsmen to include Indian architectural tradition. It sees 3 million passengers a day and serves as the headquarters of Central Railways..

Kuala Lumpur Station, Malaysia is another mixture of colonial and local architectural styles. Known for its majestic facade, this station resembles typical Victorian buildings with its glass and iron dome, while also featuring Moorish elements drawn from Islamic architecture. Kuala Lumpur Station served trains that passed through the city until 2001. These connections are now made at a new station, Kuala Lumpur Sentral.

SubQuestion No : 20

Q.20 What type of passage is the above passage?

- Ans
- ☒ 1. literary
 - ☒ 2. narrative
 - ☒ 3. descriptive
 - ☒ 4. scientific

Question ID : 630680267282

Option 1 ID : 6306801038521

Option 2 ID : 6306801038520

Option 3 ID : 6306801038519

Option 4 ID : 6306801038522

Section : Test of Hindi Language and Comprehension

Q.1 भोला कुछ नहीं जानता है। वाक्य के रेखांकित अंश को किस शब्द से प्रतिस्थापित किया जा सकता है?

- Ans
- ☒ 1. अज्ञ
 - ☒ 2. बहुज्ञ
 - ☒ 3. अल्पज्ञ
 - ☒ 4. सर्वज्ञ

Question ID : 630680267292

Option 1 ID : 6306801038561

Option 2 ID : 6306801038560

Option 3 ID : 6306801038559

Option 4 ID : 6306801038562

Q.2 वाक्य के रिक्त स्थान के लिए उपयुक्त शब्द है:

स्नेहा को वाद्य संगीत से _____ है।

- Ans
- ☒ 1. स्नेह
 - ☒ 2. प्रेम
 - ☒ 3. आसक्ति
 - ☒ 4. अनुराग

Question ID : 630680267290
Option 1 ID : 6306801038553
Option 2 ID : 6306801038552
Option 3 ID : 6306801038554
Option 4 ID : 6306801038551

Q.3 गीता _____ है। वाक्य के रिक्त स्थान को प्रेरणार्थक क्रिया से पूर्ण करें।

- Ans
- ☒ 1. जगाती
 - ☒ 2. जागती
 - ☒ 3. सोती
 - ☒ 4. लिखती

Question ID : 630680267295
Option 1 ID : 6306801038572
Option 2 ID : 6306801038571
Option 3 ID : 6306801038574
Option 4 ID : 6306801038573

Q.4 'भोजनालय' का सही संधि-विच्छेद क्या है?

- Ans
- ☒ 1. भोजन + लय
 - ☒ 2. भोज + आलय
 - ☒ 3. भोजन + आलय
 - ☒ 4. भोजना + लय

Question ID : 630680267298
Option 1 ID : 6306801038583
Option 2 ID : 6306801038584
Option 3 ID : 6306801038585
Option 4 ID : 6306801038586

Q.5 वाक्य के रिक्त स्थान के लिए उचित कारक है:

सोहन ने घड़े _____ पानी निकाला।

- Ans
- ☒ 1. को
 - ☒ 2. से
 - ☒ 3. पर
 - ☒ 4. में

Question ID : 630680267294
Option 1 ID : 6306801038567
Option 2 ID : 6306801038570
Option 3 ID : 6306801038568
Option 4 ID : 6306801038569

Q.6 बीता हुआ दिन लौकर नहीं आता। वाक्य के रेखांकित अंश को किस शब्द से प्रतिस्थापित किया जा सकता है?

- Ans ☒ 1. अर्वाचीन
☒ 2. अतीत
☒ 3. प्राचीन
☒ 4. आगामी

Question ID : 630680267293
Option 1 ID : 6306801038565
Option 2 ID : 6306801038563
Option 3 ID : 6306801038566
Option 4 ID : 6306801038564

Q.7 वाक्य के रिक्त स्थान के लिए उपयुक्त शब्द है:

मन में _____ उत्पन्न होने पर निर्णय करना कठिन होता है।

- Ans ☒ 1. संघर्ष
☒ 2. युद्ध
☒ 3. द्वंद्व
☒ 4. टकराहट

Question ID : 630680267291
Option 1 ID : 6306801038555
Option 2 ID : 6306801038557
Option 3 ID : 6306801038558
Option 4 ID : 6306801038556

Q.8 'संवाद' का सही संधि-विच्छेद क्या है?

- Ans ☒ 1. सन् + वाद
☒ 2. सम + वाद
☒ 3. सन + वाद
☒ 4. सम् + वाद

Question ID : 630680267297
Option 1 ID : 6306801038580
Option 2 ID : 6306801038581
Option 3 ID : 6306801038579
Option 4 ID : 6306801038582

Q.9 यह तो बिलकुल झूठ है। वाक्य के रेखांकित अंश को प्रतिस्थापित करने के लिए उपयुक्त मुहावरा कौन सा है?

- Ans ☒ 1. पीला झूठ
☒ 2. काला झूठ
☒ 3. सफेद झूठ
☒ 4. लाल झूठ

Question ID : 630680267299
Option 1 ID : 6306801038590
Option 2 ID : 6306801038587
Option 3 ID : 6306801038588
Option 4 ID : 6306801038589

Q.10 वाक्य के रिक्त स्थान के लिए उपयुक्त शब्द है:

पत्र का उत्तर शीघ्र देने की ____ करें।

- Ans
- ☒ 1. उदारता
 - ☒ 2. कृपा
 - ☒ 3. अनुकंपा
 - ☒ 4. दया

Question ID : 630680267289
Option 1 ID : 6306801038550
Option 2 ID : 6306801038549
Option 3 ID : 6306801038548
Option 4 ID : 6306801038547

Q.11 पदक्रम की दृष्टि से कौन सा वाक्य सही है?

- Ans
- ☒ 1. अपने मित्र का पुस्तकालय खरीदा उसने।
 - ☒ 2. पुस्तकालय खरीदा उसने अपने मित्र का।
 - ☒ 3. उसने पुस्तकालय खरीदा अपने मित्र का।
 - ☒ 4. उसने अपने मित्र का पुस्तकालय खरीदा।

Question ID : 630680267287
Option 1 ID : 6306801038541
Option 2 ID : 6306801038542
Option 3 ID : 6306801038539
Option 4 ID : 6306801038540

Q.12 'निरुपाय' का सही संधि विच्छेद कौन क्या है?

- Ans
- ☒ 1. नि + उपाय
 - ☒ 2. नी: + उपाय
 - ☒ 3. नी + उपाय
 - ☒ 4. नि: + उपाय

Question ID : 630680267296
Option 1 ID : 6306801038576
Option 2 ID : 6306801038577
Option 3 ID : 6306801038578
Option 4 ID : 6306801038575

Q.13 हार मान लेना बहादुरी नहीं है। वाक्य के रेखांकित अंश को प्रतिस्थापित करने के लिए सही मुहावरा कौन सा है?

- Ans
- ☒ 1. हवाई किले बनाना
 - ☒ 2. हथेली खोजलाना
 - ☒ 3. हाथ मारना
 - ☒ 4. हथियार डाल देना

Question ID : 630680267300
Option 1 ID : 6306801038591
Option 2 ID : 6306801038594
Option 3 ID : 6306801038592
Option 4 ID : 6306801038593

Q.14 पदक्रम की दृष्टि से कौन सा वाक्य सही है?

- Ans ☒ 1. व्यक्ति विनम्र कम बोलता है।
☒ 2. विनम्र व्यक्ति कम बोलता है।
☒ 3. कम बोलता है विनम्र व्यक्ति।
☒ 4. विनम्र व्यक्ति बोलता कम है।

Question ID : 630680267288
 Option 1 ID : 6306801038544
 Option 2 ID : 6306801038543
 Option 3 ID : 6306801038545
 Option 4 ID : 6306801038546

Q.15 ठीक – ठीक न्याय होना आवश्यक है। वाक्य के रेखांकित अंश को प्रतिस्थापित करने के लिए उपयुक्त लोकोक्ति कौन सी है?

- Ans ☒ 1. दूध का पानी पानी का दूध
☒ 2. दाल में नमक, सच में झूठ
☒ 3. दूल्हा को पत्तल नहीं, बजनिये को थाल
☒ 4. दूध का दूध पानी का पानी

Question ID : 630680267301
 Option 1 ID : 6306801038595
 Option 2 ID : 6306801038597
 Option 3 ID : 6306801038598
 Option 4 ID : 6306801038596

Comprehension:

उपरोक्त गद्यांश के आधार पर निम्नलिखित प्रश्नों के उत्तर दीजिए:

कुछ विद्वानों ने भारत को आर्यों का आदि देश माना है। लेकिन आर्यों का मूल भारत के किस क्षेत्र में था इस पर उनमें मतभेद है। अविनाश चन्द्र दास ने सप्त सैन्धव प्रदेश को ही आर्यों का आदि देश बताया है। उनके अनुसार बाद में सप्त सैन्धव प्रदेश में रहने वाले आर्यों में दो वर्ग हो गये-एक देवों का उपासक और दूसरा असुरों का। इनमें संघर्ष चलता रहा और फलस्वरूप देवासुर संग्राम हुआ जिसमें असुर पराजित हुये और सप्त सैन्धव क्षेत्र से ईरान चले गये। ईरान में रहने वाले यही असुर अहुरमज्दा के उपासक हुये। भारत को आर्यों का आदि देश मानने वाले अन्य विद्वानों में गंगानाथ झा ने ब्रह्मर्षि प्रदेश, तथा लक्ष्मीधर कल्ला ने इसे कश्मीर क्षेत्र बताया। अन्य विद्वानों में कुछ ने मध्य देश और कुछ ने मुल्तान में देविका नदी के तटवर्ती प्रदेश को आर्यों का आदि देश माना।

SubQuestion No : 16

Q.16 असुर का विलोम शब्द है:

- Ans ☒ 1. दानव
☒ 2. राक्षस
☒ 3. दनुज
☒ 4. देव

Question ID : 630680267305
 Option 1 ID : 6306801038608
 Option 2 ID : 6306801038607
 Option 3 ID : 6306801038610
 Option 4 ID : 6306801038609

Comprehension:

उपरोक्त गद्यांश के आधार पर निम्नलिखित प्रश्नों के उत्तर दीजिए:

कुछ विद्वानों ने भारत को आर्यों का आदि देश माना है। लेकिन आर्यों का मूल भारत के किस क्षेत्र में था इस पर उनमें मतभेद है। अविनाश चन्द्र दास ने सप्त सैन्धव प्रदेश को ही आर्यों का आदि देश बताया है। उनके अनुसार बाद में सप्त सैन्धव प्रदेश में रहने वाले आर्यों में दो वर्ग हो गये-एक देवों का उपासक और दूसरा असुरों का। इनमें संघर्ष चलता रहा और फलस्वरूप देवासुर संग्राम हुआ जिसमें असुर पराजित हुये और सप्त सैन्धव क्षेत्र से ईरान चले गये। ईरान में रहने वाले यही असुर अहुरमज्दा के उपासक हुये। भारत को आर्यों का आदि देश मानने वाले अन्य विद्वानों में गंगानाथ झा ने ब्रह्मर्षि प्रदेश, तथा लक्ष्मीधर कल्ला ने इसे कश्मीर क्षेत्र बताया। अन्य विद्वानों में कुछ ने मध्य देश और कुछ ने मुल्तान में देविका नदी के तटवर्ती प्रदेश को आर्यों का आदि देश माना।

SubQuestion No : 17

Q.17 भारत को आर्यों का देश मानने वालों में कौन नहीं है?

- Ans**
- ☒ 1. अविनाश चंद्र दास
 - ☒ 2. गंगानाथ झा
 - ☒ 3. लक्ष्मीधर कल्ला
 - ☒ 4. रामधारी सिंह दिनकर

Question ID : 630680267306

Option 1 ID : 6306801038611

Option 2 ID : 6306801038612

Option 3 ID : 6306801038613

Option 4 ID : 6306801038614

Comprehension:

उपरोक्त गद्यांश के आधार पर निम्नलिखित प्रश्नों के उत्तर दीजिए:

कुछ विद्वानों ने भारत को आर्यों का आदि देश माना है। लेकिन आर्यों का मूल भारत के किस क्षेत्र में था इस पर उनमें मतभेद है। अविनाश चन्द्र दास ने सप्त सैन्धव प्रदेश को ही आर्यों का आदि देश बताया है। उनके अनुसार बाद में सप्त सैन्धव प्रदेश में रहने वाले आर्यों में दो वर्ग हो गये-एक देवों का उपासक और दूसरा असुरों का। इनमें संघर्ष चलता रहा और फलस्वरूप देवासुर संग्राम हुआ जिसमें असुर पराजित हुये और सप्त सैन्धव क्षेत्र से ईरान चले गये। ईरान में रहने वाले यही असुर अहुरमज्दा के उपासक हुये। भारत को आर्यों का आदि देश मानने वाले अन्य विद्वानों में गंगानाथ झा ने ब्रह्मर्षि प्रदेश, तथा लक्ष्मीधर कल्ला ने इसे कश्मीर क्षेत्र बताया। अन्य विद्वानों में कुछ ने मध्य देश और कुछ ने मुल्तान में देविका नदी के तटवर्ती प्रदेश को आर्यों का आदि देश माना।

SubQuestion No : 18

Q.18 'आदि' का आशय है:

- Ans**
- ☒ 1. अन्तिम
 - ☒ 2. मध्यवर्ती
 - ☒ 3. आरंभिक
 - ☒ 4. प्रिय

Question ID : 630680267303

Option 1 ID : 6306801038599

Option 2 ID : 6306801038602

Option 3 ID : 6306801038600

Option 4 ID : 6306801038601

Comprehension:

उपरोक्त गद्यांश के आधार पर निम्नलिखित प्रश्नों के उत्तर दीजिए:

कुछ विद्वानों ने भारत को आर्यों का आदि देश माना है। लेकिन आर्यों का मूल भारत के किस क्षेत्र में था इस पर उनमें मतभेद है। अविनाश चन्द्र दास ने सप्त सैन्धव प्रदेश को ही आर्यों का आदि देश बताया है। उनके अनुसार बाद में सप्त सैन्धव प्रदेश में रहने वाले आर्यों में दो वर्ग हो गये-एक देवों का उपासक और दूसरा असुरों का। इनमें संघर्ष चलता रहा और फलस्वरूप देवासुर संग्राम हुआ जिसमें असुर पराजित हुये और सप्त सैन्धव क्षेत्र से ईरान चले गये। ईरान में रहने वाले यही असुर अहुरमज्दा के उपासक हुये। भारत को आर्यों का आदि देश मानने वाले अन्य विद्वानों में गंगानाथ झा ने ब्रह्मर्षि प्रदेश, तथा लक्ष्मीधर कल्ला ने इसे कश्मीर क्षेत्र बताया। अन्य विद्वानों में कुछ ने मध्य देश और कुछ ने मुल्तान में देविका नदी के तटवर्ती प्रदेश को आर्यों का आदि देश माना।

SubQuestion No : 19

Q.19 'संग्राम' का पर्यायवाची है:

- Ans ☒ 1. संवाद
☒ 2. युद्ध
☒ 3. समझौता
☒ 4. सम्मेलन

Question ID : 630680267304

Option 1 ID : 6306801038606

Option 2 ID : 6306801038603

Option 3 ID : 6306801038605

Option 4 ID : 6306801038604

Comprehension:

उपरोक्त गद्यांश के आधार पर निम्नलिखित प्रश्नों के उत्तर दीजिए:

कुछ विद्वानों ने भारत को आर्यों का आदि देश माना है। लेकिन आर्यों का मूल भारत के किस क्षेत्र में था इस पर उनमें मतभेद है। अविनाश चन्द्र दास ने सप्त सैन्धव प्रदेश को ही आर्यों का आदि देश बताया है। उनके अनुसार बाद में सप्त सैन्धव प्रदेश में रहने वाले आर्यों में दो वर्ग हो गये-एक देवों का उपासक और दूसरा असुरों का। इनमें संघर्ष चलता रहा और फलस्वरूप देवासुर संग्राम हुआ जिसमें असुर पराजित हुये और सप्त सैन्धव क्षेत्र से ईरान चले गये। ईरान में रहने वाले यही असुर अहुरमज्दा के उपासक हुये। भारत को आर्यों का आदि देश मानने वाले अन्य विद्वानों में गंगानाथ झा ने ब्रह्मर्षि प्रदेश, तथा लक्ष्मीधर कल्ला ने इसे कश्मीर क्षेत्र बताया। अन्य विद्वानों में कुछ ने मध्य देश और कुछ ने मुल्तान में देविका नदी के तटवर्ती प्रदेश को आर्यों का आदि देश माना।

SubQuestion No : 20

Q.20 गद्यांश के संदर्भ में कौन सा कथन गलत है?

- Ans ☒ 1. ईरान में रहने वाले असुर अहुरमज्दा के उपासक हुए।
☒ 2. कुछ विद्वानों ने आर्यों का मूल स्थान मध्य देश को माना है।
☒ 3. आर्यों का मूल स्थान भारत के किस क्षेत्र में था, यह निर्विवादित है।
☒ 4. देवासुर संग्राम में असुर पराजित हुए।

Question ID : 630680267307

Option 1 ID : 6306801038617

Option 2 ID : 6306801038616

Option 3 ID : 6306801038615

Option 4 ID : 6306801038618

Q.1 Which Canon guides the choice of personal name in Classified Catalogue Code?

- Ans**
- ☒ 1. Canon of Context
 - ☒ 2. Canon of Currency
 - ☒ 3. Canon of Prepotence
 - ☒ 4. Canon of Ascertainability

Question ID : 630680267402
Option 1 ID : 6306801038997
Option 2 ID : 6306801038998
Option 3 ID : 6306801038996
Option 4 ID : 6306801038995

Q.2 What is the basic purpose of Library Classification?

- Ans**
- ☒ 1. Arrangement of books for compact storage of books
 - ☒ 2. Arrangement of books in a logical and helpful sequence
 - ☒ 3. Arrangement of books to facilitate stock verification
 - ☒ 4. Arrangement of Universe of knowledge into disciplines

Question ID : 630680267328
Option 1 ID : 6306801038701
Option 2 ID : 6306801038699
Option 3 ID : 6306801038700
Option 4 ID : 6306801038702

Q.3 Who, among the following, organized International Conference of Knowledge Organization?

- Ans**
- ☒ 1. Library Research Circle
 - ☒ 2. FID /CR
 - ☒ 3. Classification Research Group (CRG)
 - ☒ 4. International Society for Knowledge Organization (ISKO)

Question ID : 630680267344
Option 1 ID : 6306801038766
Option 2 ID : 6306801038763
Option 3 ID : 6306801038764
Option 4 ID : 6306801038765

Q.4 Which of the following is the function of a University Library?

- Ans**
- ☒ 1. Providing recreational information and services
 - ☒ 2. Providing community information services
 - ☒ 3. Producing National Union Catalogue
 - ☒ 4. Providing pin pointed and exhaustive research information

Question ID : 630680267312
Option 1 ID : 6306801038636
Option 2 ID : 6306801038635
Option 3 ID : 6306801038637
Option 4 ID : 6306801038638

Q.5 What is the method of stock verification, if it is done according to the subject arrangement of the books?

- Ans**
- ☒ 1. Stock taking by accession number
 - ☒ 2. Stock taking by separate sheets
 - ☒ 3. Stock taking by shelf list cards
 - ☒ 4. Stock taking by numerical counting

Question ID : 630680267384
Option 1 ID : 6306801038923
Option 2 ID : 6306801038925
Option 3 ID : 6306801038926
Option 4 ID : 6306801038924

Q.6 What is meant by 'Residual Method' with reference to Fundamental Categories?

- Ans**
- ☒ 1. Method of identifying Space facet
 - ☒ 2. Method of identifying Matter facet
 - ☒ 3. Method of identifying Energy facet
 - ☒ 4. Method of identifying Personality facet

Question ID : 630680267338
Option 1 ID : 6306801038742
Option 2 ID : 6306801038740
Option 3 ID : 6306801038741
Option 4 ID : 6306801038739

Q.7 Which of the following is a meta search engine?

- Ans**
- ☒ 1. Sirus
 - ☒ 2. Dogpile
 - ☒ 3. DMOZ
 - ☒ 4. Swoogle

Question ID : 630680267374
Option 1 ID : 6306801038883
Option 2 ID : 6306801038885
Option 3 ID : 6306801038884
Option 4 ID : 6306801038886

Q.8 What type of relation exists in the subject "Impact of Buddhism on Jainism"?

- Ans**
- ☒ 1. Intra-facet influencing relation
 - ☒ 2. Inter-facet influencing relation
 - ☒ 3. Intra-array bias relation
 - ☒ 4. General bias Phase relation

Question ID : 630680267336
Option 1 ID : 6306801038732
Option 2 ID : 6306801038733
Option 3 ID : 6306801038734
Option 4 ID : 6306801038731

Q.9 What is GENESIS?

- Ans
- ☐ 1. WINISIS on LAN through the shared network
 - ☐ 2. WINSIS Querying database
 - ☐ 3. A WINISIS over TCP/IP
 - ☒ 4. A front-end to integrate WWWISIS and WINISIS

Question ID : 630680267357
Option 1 ID : 6306801038817
Option 2 ID : 6306801038818
Option 3 ID : 6306801038815
Option 4 ID : 6306801038816

Q.10 What is the application of word processing software?

- Ans
- ☐ 1. Collect, search and manipulate unique data
 - ☐ 2. Controls the execution of a computer
 - ☒ 3. Interactive editing of documents
 - ☐ 4. Facilitate writing Programming Code

Question ID : 630680267348
Option 1 ID : 6306801038779
Option 2 ID : 6306801038780
Option 3 ID : 6306801038782
Option 4 ID : 6306801038781

Q.11 Which of the following Indian language collections are NOT included in the National Library of India?

- Ans
- ☐ 1. Urdu
 - ☐ 2. Kashmiri
 - ☒ 3. Manipuri
 - ☐ 4. Sanskrit

Question ID : 630680267311
Option 1 ID : 6306801038634
Option 2 ID : 6306801038633
Option 3 ID : 6306801038632
Option 4 ID : 6306801038631

Q.12 What is meant by the 'APUPA pattern' of the shelf arrangement?

- Ans
- ☐ 1. Arrangement of books from specific to specific
 - ☐ 2. Arrangement of books from general to general
 - ☐ 3. Arrangement of books from Specific to general
 - ☒ 4. Arrangement of books from general to specific

Question ID : 630680267330
Option 1 ID : 6306801038710
Option 2 ID : 6306801038707
Option 3 ID : 6306801038708
Option 4 ID : 6306801038709

Q.13 How do you categorize the process of calling quotation for the rates of supply?

Ans

☒ 1. Book accessioning

☒ 2. Book processing

☒ 3. Book order

☒ 4. Book selection

Question ID : 630680267383

Option 1 ID : 6306801038921

Option 2 ID : 6306801038922

Option 3 ID : 6306801038920

Option 4 ID : 6306801038919

Q.14 Which of the following Committee is most powerful?

Ans

☒ 1. Nominated Committee

☒ 2. Recommending Committee

☒ 3. Ad hoc Committee

☒ 4. Executive Committee

Question ID : 630680267377

Option 1 ID : 6306801038896

Option 2 ID : 6306801038898

Option 3 ID : 6306801038895

Option 4 ID : 6306801038897

Q.15 Which option on the menu bar facilitate to draw a chart in Power Point Presentation?

Ans

☒ 1. Animation

☒ 2. Transition

☒ 3. Design

☒ 4. Insert

Question ID : 630680267364

Option 1 ID : 6306801038846

Option 2 ID : 6306801038845

Option 3 ID : 6306801038844

Option 4 ID : 6306801038843

Q.16 When does Sear's List of Subject Headings was first published?

Ans

☒ 1. 1923

☒ 2. 1933

☒ 3. 1911

☒ 4. 1909

Question ID : 630680267406

Option 1 ID : 6306801039013

Option 2 ID : 6306801039014

Option 3 ID : 6306801039012

Option 4 ID : 6306801039011

Q.17 What type of links are the ‘connecting symbols and indicators’ in Chain Indexing?

- Ans
- ☐

1. Sought Links
- ☐

2. Un-sought Links
- ☐

3. Missing Links
- ☒

4. False Links

Question ID : 630680267407
Option 1 ID : 6306801039015
Option 2 ID : 6306801039016
Option 3 ID : 6306801039018
Option 4 ID : 6306801039017

Q.18 A classification system which systematically lists all subjects of past, present and foreseeable future divided into disciplines, main classes and their subdivisions is called as:

- Ans
- ☐

1. Faceted System
- ☒

2. Enumerative System
- ☐

3. Analytico – synthetic System
- ☐

4. Rigidly Faceted System

Question ID : 630680267329
Option 1 ID : 6306801038705
Option 2 ID : 6306801038703
Option 3 ID : 6306801038704
Option 4 ID : 6306801038706

Q.19 How does the ordinal values of the Indicator Digits were fixed in CC, Ed 6?

- Ans
- ☐

1. Increasing order
- ☐

2. Semantic order
- ☐

3. Equal order
- ☒

4. Decreasing order

Question ID : 630680267346
Option 1 ID : 6306801038771
Option 2 ID : 6306801038774
Option 3 ID : 6306801038773
Option 4 ID : 6306801038772

Q.20 Peeling an onion is an example of

- Ans
- ☐

1. Lamination
- ☒

2. Denudation
- ☐

3. Fission
- ☐

4. Dissection

Question ID : 630680267334
Option 1 ID : 6306801038725
Option 2 ID : 6306801038724
Option 3 ID : 6306801038726
Option 4 ID : 6306801038723

Q.1 What is the term used for the Classes derived on the basis of a single characteristic, and arranged in the preferred sequences?

- Ans
- ☒ 1. Facet
 - ☒ 2. Array
 - ☒ 3. Analysis
 - ☒ 4. Attribute

Question ID : 630680267327
Option 1 ID : 6306801038697
Option 2 ID : 6306801038698
Option 3 ID : 6306801038695
Option 4 ID : 6306801038696

Q.2 What is the vital role of libraries among the following?

- Ans
- ☒ 1. Transmission of knowledge
 - ☒ 2. Production of knowledge
 - ☒ 3. Imparting education and training
 - ☒ 4. Serving users with extension activities

Question ID : 630680267308
Option 1 ID : 6306801038621
Option 2 ID : 6306801038619
Option 3 ID : 6306801038620
Option 4 ID : 6306801038622

Q.3 Which of the budgetary system defines the objectives to be accomplished before the resources are allocated to carry out the programmes?

- Ans
- ☒ 1. Planning Programming Budgeting System
 - ☒ 2. Lump sum Budgeting System
 - ☒ 3. Zero based Budgeting System
 - ☒ 4. Formula Budgeting System

Question ID : 630680267380
Option 1 ID : 6306801038907
Option 2 ID : 6306801038909
Option 3 ID : 6306801038908
Option 4 ID : 6306801038910

Q.4 What do the '/etc' denotes in LINUX software?

- Ans
- ☒ 1. Process files
 - ☒ 2. Temporary files
 - ☒ 3. Configuration files
 - ☒ 4. Device files

Question ID : 630680267366
Option 1 ID : 6306801038853
Option 2 ID : 6306801038854
Option 3 ID : 6306801038851
Option 4 ID : 6306801038852

Q.5 Performing operations on different processing units simultaneously is called as:

- Ans
1. Time sharing processing

2. Parallel processing

3. Online processing

4. Real time processing

Question ID : 630680267347

Option 1 ID : 6306801038778

Option 2 ID : 6306801038775

Option 3 ID : 6306801038776

Option 4 ID : 6306801038777

Q.6 Which of the following is unique for periodicals acquisition?

- Ans
1. Institutional membership

2. Purchase

3. Gifts

4. Exchange

Question ID : 630680267382

Option 1 ID : 6306801038918

Option 2 ID : 6306801038915

Option 3 ID : 6306801038917

Option 4 ID : 6306801038916

Q.7 Which of the following statement is true for LIS Profession

- Ans
1. Occupation that involves physical or mental activity

2. Need certain skills or no skills

3. A craft or trade or profession

4. A specialized knowledge of the field, with needed skills

Question ID : 630680267325

Option 1 ID : 6306801038689

Option 2 ID : 6306801038688

Option 3 ID : 6306801038687

Option 4 ID : 6306801038690

Q.8 Who introduced the concept of the Total Quality Management?

- Ans
1. John P. Kotter

2. W. Dupont

3. James E Kelly

4. W. Edward Deming

Question ID : 630680267378

Option 1 ID : 6306801038902

Option 2 ID : 6306801038900

Option 3 ID : 6306801038901

Option 4 ID : 6306801038899

Q.9 What are the automatic computer programs that traverse the World Wide Web?

- Ans ☒ 1. The Robot
☒ 2. Meta Description
☒ 3. The Database
☒ 4. The Agent

Question ID : 630680267360
 Option 1 ID : 6306801038827
 Option 2 ID : 6306801038830
 Option 3 ID : 6306801038829
 Option 4 ID : 6306801038828

Q.10 To satisfy which Law among the Five Laws of Library Science, the libraries have opted 'Open Access System'?

- Ans ☒ 1. Third Law
☒ 2. Fifth Law
☒ 3. First Law
☒ 4. Second Law

Question ID : 630680267310
 Option 1 ID : 6306801038629
 Option 2 ID : 6306801038630
 Option 3 ID : 6306801038627
 Option 4 ID : 6306801038628

Q.11 What are the neo-conventional documentary sources as categorized by S.R.Ranganathan?

- Ans ☒ 1. Books, periodicals, maps and atlases
☒ 2. Direct created documents without any human intervention
☒ 3. Standards, specifications, patents, data
☒ 4. Audios, visuals, audio- visuals, microforms

Question ID : 630680267390
 Option 1 ID : 6306801038947
 Option 2 ID : 6306801038950
 Option 3 ID : 6306801038948
 Option 4 ID : 6306801038949

Q.12 Which of the following evaluation criteria indicates the reputation of author and publishers?

- Ans ☒ 1. Scope and Purpose
☒ 2. Authority
☒ 3. Currency
☒ 4. Arrangement

Question ID : 630680267389
 Option 1 ID : 6306801038943
 Option 2 ID : 6306801038944
 Option 3 ID : 6306801038945
 Option 4 ID : 6306801038946

Q.13 Which of the following provides data on number of visitors (foot-fall)?

- Ans
- ☐ 1. Cost records
 - ☐ 2. Issue records
 - ☐ 3. Accession register
 - ☒ 4. Gate register

Question ID : 630680267385
Option 1 ID : 6306801038928
Option 2 ID : 6306801038929
Option 3 ID : 6306801038930
Option 4 ID : 6306801038927

Q.14 What is the record structure used for exporting and importing in WINISIS?

- Ans
- ☐ 1. ISO 15836:2003
 - ☐ 2. OAI-PMH
 - ☒ 3. ISO 2709
 - ☐ 4. z39.50

Question ID : 630680267368
Option 1 ID : 6306801038859
Option 2 ID : 6306801038861
Option 3 ID : 6306801038862
Option 4 ID : 6306801038860

Q.15 What type of Common Isolate is 'd Institutions' according to Colon Classification Ed 6?

- Ans
- ☐ 1. Anteriorising Common Isolate before Space
 - ☐ 2. Energy Posteriorising Common Isolate
 - ☒ 3. Personality Posteriorising Common Isolate
 - ☐ 4. Anteriorising Common Isolate after Space

Question ID : 630680267337
Option 1 ID : 6306801038735
Option 2 ID : 6306801038738
Option 3 ID : 6306801038737
Option 4 ID : 6306801038736

Q.16 Which of the following is the purpose of library legislation?

- Ans
- ☒ 1. To provide a well organised Public Library System for the state, district and up to the remote village level free of cost
 - ☐ 2. To develop a Bibliography in the language of the region.
 - ☐ 3. To act as regional Repository Centre under Delivery of Books and Newspapers Act, 1954
 - ☐ 4. To collect and preserve printed material published in the State

Question ID : 630680267315
Option 1 ID : 6306801038650
Option 2 ID : 6306801038648
Option 3 ID : 6306801038649
Option 4 ID : 6306801038647

Q.17 Who first conceived the concept of Information Literacy?

- Ans
- ☒ 1. Angela Sample
 - ☒ 2. Paul Zurkowski
 - ☒ 3. CILIP
 - ☒ 4. ALA

Question ID : 630680267397
Option 1 ID : 6306801038976
Option 2 ID : 6306801038975
Option 3 ID : 6306801038978
Option 4 ID : 6306801038977

Q.18 Which of the emerging technology is advantageous in the automated circulation system?

- Ans
- ☒ 1. RFID Technology
 - ☒ 2. UWB Technology
 - ☒ 3. Barcode technology
 - ☒ 4. NFC Devices

Question ID : 630680267350
Option 1 ID : 6306801038789
Option 2 ID : 6306801038790
Option 3 ID : 6306801038788
Option 4 ID : 6306801038787

Q.19 Which of the following is NOT a tertiary source of information?

- Ans
- ☒ 1. Survey publication
 - ☒ 2. Union Catalogue
 - ☒ 3. Guide to Reference Sources
 - ☒ 4. Bibliography of Bibliography

Question ID : 630680267392
Option 1 ID : 6306801038955
Option 2 ID : 6306801038956
Option 3 ID : 6306801038958
Option 4 ID : 6306801038957

Q.20 What is meant by “All – through arrangement” of filing of entries?

- Ans
- ☒ 1. Letter by letter arrangement
 - ☒ 2. Word by word arrangement
 - ☒ 3. Class number arrangement
 - ☒ 4. Class number and Book number arrangement

Question ID : 630680267401
Option 1 ID : 6306801038991
Option 2 ID : 6306801038992
Option 3 ID : 6306801038993
Option 4 ID : 6306801038994

Q.1 What is an Internet Backbone in the Internet Topology?

- Ans

1. High-speed data transmission line of networking facilities with routers

2. Point of Presence

3. Internet Service Providers

4. Network Access Points

Question ID : 630680267359

Option 1 ID : 6306801038825

Option 2 ID : 6306801038823

Option 3 ID : 6306801038824

Option 4 ID : 6306801038826

Q.2 How do you categorize an e-reference that does not actually answer questions, but provides resources and links?

- Ans

1. E-Mail Reference Service

2. Virtual Reference Desk

3. Roving Reference Service

4. Digital Reference Robots

Question ID : 630680267394

Option 1 ID : 6306801038964

Option 2 ID : 6306801038963

Option 3 ID : 6306801038966

Option 4 ID : 6306801038965

Q.3 Which of the following language is used in DBMS to define the conceptual and internal schemas?

- Ans

1. DML

2. TCL

3. DDL

4. DCL

Question ID : 630680267355

Option 1 ID : 6306801038810

Option 2 ID : 6306801038807

Option 3 ID : 6306801038809

Option 4 ID : 6306801038808

Q.4 In which year the Press and Registration of Books Act was passed?

- Ans

1. 1897

2. 1881

3. 1867

4. 1910

Question ID : 630680267318

Option 1 ID : 6306801038661

Option 2 ID : 6306801038660

Option 3 ID : 6306801038659

Option 4 ID : 6306801038662

Q.5 Which of the following step involves field selection and index access in GENESIS implementation?

- Ans
- ☐ 1. Test the application
 - ☐ 2. Display of query results
 - ☒ 3. Web query form
 - ☐ 4. Display of record's details

Question ID : 630680267370
Option 1 ID : 6306801038870
Option 2 ID : 6306801038868
Option 3 ID : 6306801038867
Option 4 ID : 6306801038869

Q.6 Which school of thought does Abraham Harold Maslow, popular for hierarchy of needs, belongs to?

- Ans
- ☒ 1. Behavioral school
 - ☐ 2. Beaurocratic school
 - ☐ 3. Contingency school
 - ☐ 4. System theory school

Question ID : 630680267375
Option 1 ID : 6306801038888
Option 2 ID : 6306801038887
Option 3 ID : 6306801038890
Option 4 ID : 6306801038889

Q.7 In which of the following forms of catalogue all the entries (author, title, subject series etc) and their related references are arranged together in one general alphabet?

- Ans
- ☒ 1. Dictionary Catalogue
 - ☐ 2. Automated Catalogue
 - ☐ 3. Alphabetic - Classed Catalogue
 - ☐ 4. Classified Catalogue

Question ID : 630680267399
Option 1 ID : 6306801038984
Option 2 ID : 6306801038986
Option 3 ID : 6306801038985
Option 4 ID : 6306801038983

Q.8 What is the purpose of using Z39.50?

- Ans
- ☐ 1. Move files from one computer to another
 - ☐ 2. Processing bibliographic data
 - ☐ 3. Data format validation
 - ☒ 4. Information retrieval: Application service

Question ID : 630680267351
Option 1 ID : 6306801038792
Option 2 ID : 6306801038793
Option 3 ID : 6306801038794
Option 4 ID : 6306801038791

Q.9 What is Knowledge?

- Ans
- ☐ 1. Repetitive and quantifiable expression
 - ☐ 2. Transitory flow of messages
 - ☐ 3. Individual trait that leads to virtues and vision
 - ☒ 4. Logically structured and coherent set of facts

Question ID : 630680267320
Option 1 ID : 6306801038667
Option 2 ID : 6306801038668
Option 3 ID : 6306801038670
Option 4 ID : 6306801038669

Q.10 What is the entry element in the Heading Section of the Classified Catalogue Code?

- Ans
- ☒ 1. Author
 - ☐ 2. Call Number
 - ☐ 3. Title
 - ☐ 4. Title and Statement of responsibility

Question ID : 630680267400
Option 1 ID : 6306801038989
Option 2 ID : 6306801038987
Option 3 ID : 6306801038988
Option 4 ID : 6306801038990

Q.11 Which of the following technique is used to create the Cartoon characters?

- Ans
- ☐ 1. Designs
 - ☒ 2. Animations
 - ☐ 3. Simulations
 - ☐ 4. Illustrations

Question ID : 630680267349
Option 1 ID : 6306801038785
Option 2 ID : 6306801038784
Option 3 ID : 6306801038786
Option 4 ID : 6306801038783

Q.12 What is the name of the search technique that employs quotes before and after search keywords (E.g., "galaxies")?

- Ans
- ☐ 1. Truncation
 - ☐ 2. Proximity searching
 - ☐ 3. Boolean searching
 - ☒ 4. Phrase searching

Question ID : 630680267361
Option 1 ID : 6306801038833
Option 2 ID : 6306801038831
Option 3 ID : 6306801038832
Option 4 ID : 6306801038834

Q.13 Who developed WWWISIS?

- Ans ☒ 1. Bireme, Brazil
☒ 2. Katipo Communications
☒ 3. UNESCO
☒ 4. DuraSpace

Question ID : 630680267356
 Option 1 ID : 6306801038814
 Option 2 ID : 6306801038812
 Option 3 ID : 6306801038811
 Option 4 ID : 6306801038813

Q.14 Which of the following modules are included in the Standard Set of the Alice for Windows Library Management Software?

- Ans ☒ 1. Management, Circulation, OPAC
☒ 2. Periodicals, Journal Indexing, Multimedia
☒ 3. Reservation, Interlibrary loan, Patron self-checking
☒ 4. Retrospective conversion, Multimedia, Web Inquiry

Question ID : 630680267367
 Option 1 ID : 6306801038857
 Option 2 ID : 6306801038855
 Option 3 ID : 6306801038856
 Option 4 ID : 6306801038858

Q.15 Which of the following type of service has 'User Profile' component?

- Ans ☒ 1. Contents by Journal Service
☒ 2. Newspaper Clipping service
☒ 3. Selective Dissemination of Information Service
☒ 4. Current Awareness Service

Question ID : 630680267395
 Option 1 ID : 6306801038969
 Option 2 ID : 6306801038967
 Option 3 ID : 6306801038970
 Option 4 ID : 6306801038968

Q.16 In which year INFLIBNET has released the SOUL 3.0?

- Ans ☒ 1. 2021
☒ 2. 2009
☒ 3. 2022
☒ 4. 2010

Question ID : 630680267352
 Option 1 ID : 6306801038797
 Option 2 ID : 6306801038795
 Option 3 ID : 6306801038798
 Option 4 ID : 6306801038796

Q.17 Which of the following statement is NOT true for an LIS professional in digital era?

- Ans
- ☒ 1. Serves as an information provider and facilitator
 - ☒ 2. Networking for information provision and source providers
 - ☒ 3. Functions as library-centered with in-house collections
 - ☒ 4. Utilizes technology for enhancement of information access and delivery

Question ID : 630680267326
Option 1 ID : 6306801038692
Option 2 ID : 6306801038694
Option 3 ID : 6306801038691
Option 4 ID : 6306801038693

Q.18 Who, among the following, formulated "Rules for a Dictionary Catalogue" (1876)?

- Ans
- ☒ 1. A. G.M. Panizzi
 - ☒ 2. Charles Ammi Cutter
 - ☒ 3. Jacquest Charles Brunet
 - ☒ 4. Charles C. Jewett

Question ID : 630680267398
Option 1 ID : 6306801038979
Option 2 ID : 6306801038981
Option 3 ID : 6306801038982
Option 4 ID : 6306801038980

Q.19 Which of the following is a demerit of GENESIS Web interface in retrieval of documents?

- Ans
- ☒ 1. Display of particular record's results
 - ☒ 2. Search not possible with PDF, images
 - ☒ 3. Speedy search and accessible anywhere
 - ☒ 4. Searching 'full text' and within 'full text'

Question ID : 630680267371
Option 1 ID : 6306801038871
Option 2 ID : 6306801038874
Option 3 ID : 6306801038873
Option 4 ID : 6306801038872

Q.20 Why information is valuable in the context of libraries?

- Ans
- ☒ 1. Information for scientific research
 - ☒ 2. Information is with contradictory conceptions
 - ☒ 3. Information for entertainment
 - ☒ 4. Information indiscipline

Question ID : 630680267387
Option 1 ID : 6306801038935
Option 2 ID : 6306801038938
Option 3 ID : 6306801038936
Option 4 ID : 6306801038937

Q.1 In DDC, which of the following is NOT a source of notation for number building?

- Ans
- ☒ 1. Other parts of the schedules
 - ☒ 2. Table 1 Standard Subdivisions
 - ☒ 3. Relative Index
 - ☒ 4. Add tables in the schedules

Question ID : 630680267345
Option 1 ID : 6306801038769
Option 2 ID : 6306801038767
Option 3 ID : 6306801038768
Option 4 ID : 6306801038770

Q.2 In which of the following Wall-Picture principle is used?

- Ans
- ☒ 1. Facet sequence
 - ☒ 2. Helpful sequence
 - ☒ 3. Mnemonic sequence
 - ☒ 4. Chronological sequence

Question ID : 630680267333
Option 1 ID : 6306801038719
Option 2 ID : 6306801038720
Option 3 ID : 6306801038721
Option 4 ID : 6306801038722

Q.3 Who is the Compiler of 'Tagore Web-bibliography'?

- Ans
- ☒ 1. National Library of India, Kolkata
 - ☒ 2. RRRLF, Kolkata
 - ☒ 3. National Digital Library of India, IIT, Kharagpur
 - ☒ 4. Central Library, Visvabharati University, Santiniketan

Question ID : 630680267314
Option 1 ID : 6306801038643
Option 2 ID : 6306801038644
Option 3 ID : 6306801038645
Option 4 ID : 6306801038646

Q.4 Which of the following are Empty Digits in Colon Classification?

- Ans
- ☒ 1. T,V
 - ☒ 2. 9,Z
 - ☒ 3. U,W
 - ☒ 4. 4,X

Question ID : 630680267341
Option 1 ID : 6306801038751
Option 2 ID : 6306801038753
Option 3 ID : 6306801038752
Option 4 ID : 6306801038754

Q.5 What is a Superimposition Device?

- Ans
- ☒

1. Use of specific digit(s) to represent specific concepts in all classes
- ☒

2. Use of geographical character for the formation or subdivision of Personality facet
- ☒

3. Two isolate ideas are combined with the symbol hyphen
- ☒

4. Use of appropriate class characteristics of other subjects for subdivision of isolates

Question ID : 630680267339

Option 1 ID : 6306801038743

Option 2 ID : 6306801038746

Option 3 ID : 6306801038744

Option 4 ID : 6306801038745

Q.6 Which of the following component in communication process, select, encode and transmit as message?

- Ans
- ☒

1. Channel
- ☒

2. Sender
- ☒

3. Receiver
- ☒

4. Source

Question ID : 630680267322

Option 1 ID : 6306801038677

Option 2 ID : 6306801038676

Option 3 ID : 6306801038678

Option 4 ID : 6306801038675

Q.7 Which among the following performs the Scheduling and execution of all processes of the computer?

- Ans
- ☒

1. Unique application software
- ☒

2. System management software
- ☒

3. System development software
- ☒

4. Standard application software

Question ID : 630680267362

Option 1 ID : 6306801038838

Option 2 ID : 6306801038835

Option 3 ID : 6306801038836

Option 4 ID : 6306801038837

Q.8 Which of the following is a secondary source of information?

- Ans
- ☒

1. Memoirs
- ☒

2. Indexing Periodical
- ☒

3. Computer software
- ☒

4. Dissertations

Question ID : 630680267391

Option 1 ID : 6306801038952

Option 2 ID : 6306801038954

Option 3 ID : 6306801038951

Option 4 ID : 6306801038953

Q.9 How do you categorize the Shannon and Weaver's Model of Communication?

- Ans
- ☒ 1. Transitional model
 - ☒ 2. Interactive model
 - ☒ 3. Linear model
 - ☒ 4. Helical model

Question ID : 630680267321
Option 1 ID : 6306801038673
Option 2 ID : 6306801038672
Option 3 ID : 6306801038671
Option 4 ID : 6306801038674

Q.10 How do you enter a work of shared responsibility among more than three corporate bodies and the responsibility is diffused?

- Ans
- ☒ 1. Title
 - ☒ 2. First two Corporate Bodies
 - ☒ 3. Three Corporate Bodies
 - ☒ 4. First Corporate Body

Question ID : 630680267404
Option 1 ID : 6306801039006
Option 2 ID : 6306801039004
Option 3 ID : 6306801039005
Option 4 ID : 6306801039003

Q.11 What is the 'specific added class number entry' in CCC?

- Ans
- ☒ 1. Cross Reference Index Entry
 - ☒ 2. Book Index Entry
 - ☒ 3. Cross Reference Entry
 - ☒ 4. Class Index Entry

Question ID : 630680267405
Option 1 ID : 6306801039010
Option 2 ID : 6306801039009
Option 3 ID : 6306801039007
Option 4 ID : 6306801039008

Q.12 What is the nature of information, if it builds universe of knowledge through gathering, storing, application and generating of information?

- Ans
- ☒ 1. Information is Power
 - ☒ 2. Information is interdisciplinary
 - ☒ 3. Information is scatter
 - ☒ 4. Information is a commodity

Question ID : 630680267319
Option 1 ID : 6306801038664
Option 2 ID : 6306801038663
Option 3 ID : 6306801038665
Option 4 ID : 6306801038666

Q.13 Who publishes Index Translationum?

Ans

☒ 1. NISCAIR

☒ 2. UNESCO

☒ 3. BARC

☒ 4. International Translation Centre

Question ID : 630680267396

Option 1 ID : 6306801038973

Option 2 ID : 6306801038972

Option 3 ID : 6306801038974

Option 4 ID : 6306801038971

Q.14 Which of the following is a special scheme of library classification?

Ans

☒ 1. IndCat of INFLIBNET

☒ 2. Broad System of Ordering

☒ 3. National Library of Medicine (NLM) classification system

☒ 4. Bliss Bibliographic Classification

Question ID : 630680267343

Option 1 ID : 6306801038760

Option 2 ID : 6306801038761

Option 3 ID : 6306801038759

Option 4 ID : 6306801038762

Q.15 Which of the following statement is true for Apache Server?

Ans

☒ 1. Corporate support

☒ 2. Runs only on WINDOWS

☒ 3. Runs on any Operating System

☒ 4. Integrates with ASP and other scripting languages

Question ID : 630680267358

Option 1 ID : 6306801038822

Option 2 ID : 6306801038819

Option 3 ID : 6306801038821

Option 4 ID : 6306801038820

Q.16 Which level of the DBMS Architecture is concerned with the way individual users see the data?

Ans

☒ 1. Conceptual Level

☒ 2. Internal Level

☒ 3. Database Level

☒ 4. External Level

Question ID : 630680267353

Option 1 ID : 6306801038800

Option 2 ID : 6306801038801

Option 3 ID : 6306801038802

Option 4 ID : 6306801038799

Q.17 Who initiated the Model Library Act as a conference paper during All Asia Educational Conference held at Banaras?

- Ans
- ☒ 1. Velaga Venkatappiah
 - ☒ 2. B.S.Kesavan
 - ☒ 3. S.R.Ranganathan
 - ☒ 4. K.P.Sinha

Question ID : 630680267316
Option 1 ID : 6306801038651
Option 2 ID : 6306801038652
Option 3 ID : 6306801038653
Option 4 ID : 6306801038654

Q.18 What is an Annual Report?

- Ans
- ☒ 1. Actual work done during the previous year
 - ☒ 2. Qualitative data of services offered
 - ☒ 3. Estimation of work for the coming year
 - ☒ 4. Estimation of finances for the coming year

Question ID : 630680267386
Option 1 ID : 6306801038933
Option 2 ID : 6306801038934
Option 3 ID : 6306801038931
Option 4 ID : 6306801038932

Q.19 Which of the following is the guidance function of reference service?

- Ans
- ☒ 1. Recommending a good reference source for the respective fields
 - ☒ 2. Teaching the usage of the Online Catalogues
 - ☒ 3. Evaluating the information usage
 - ☒ 4. Preparing bibliographies for easy search

Question ID : 630680267393
Option 1 ID : 6306801038961
Option 2 ID : 6306801038959
Option 3 ID : 6306801038962
Option 4 ID : 6306801038960

Q.20 In Systems approach to Library classification, all processes are considered as:

- Ans
- ☒ 1. Personality
 - ☒ 2. Energy B
 - ☒ 3. Energy A
 - ☒ 4. Matter

Question ID : 630680267335
Option 1 ID : 6306801038727
Option 2 ID : 6306801038730
Option 3 ID : 6306801038729
Option 4 ID : 6306801038728

Q.1 Which of the following Windows Operating System has Windows Aero?

- Ans
- ☐ 1. Windows Server 2003
 - ☐ 2. Windows ME
 - ☒ 3. Windows Vista
 - ☐ 4. Windows XP

Question ID : 630680267363
Option 1 ID : 6306801038841
Option 2 ID : 6306801038839
Option 3 ID : 6306801038842
Option 4 ID : 6306801038840

Q.2 Which of the following is the specific character of electronic resources?

- Ans
- ☒ 1. Updated easily
 - ☐ 2. Medium
 - ☐ 3. Format
 - ☐ 4. Availability

Question ID : 630680267388
Option 1 ID : 6306801038942
Option 2 ID : 6306801038940
Option 3 ID : 6306801038941
Option 4 ID : 6306801038939

Q.3 Which file is used for normal method of searching in WINISIS?

- Ans
- ☐ 1. Hash file
 - ☐ 2. Sequential file
 - ☒ 3. Inverted file
 - ☐ 4. Heap file

Question ID : 630680267372
Option 1 ID : 6306801038875
Option 2 ID : 6306801038878
Option 3 ID : 6306801038877
Option 4 ID : 6306801038876

Q.4 What is a meta search?

- Ans
- ☐ 1. Use of controlled vocabulary
 - ☒ 2. Use of a variety of search tools simultaneously.
 - ☐ 3. Browsing rather than focused search
 - ☐ 4. Filtering to reduce the amount of items retrieved

Question ID : 630680267373
Option 1 ID : 6306801038882
Option 2 ID : 6306801038879
Option 3 ID : 6306801038881
Option 4 ID : 6306801038880

Q.5 According to S.R.Ranganathan's Staff Formula, how many professionals are required in the acquisition section?

- Ans
- ☒ 1. 1 person for accessing 6000 books in a year
- ☐ 2. 1 person for accessing 3000 books in a year
- ☐ 3. 1 person for accessing 2000 books in a year
- ☐ 4. 1 person for accessing 1500 books in a year

Question ID : 630680267381
Option 1 ID : 6306801038914
Option 2 ID : 6306801038913
Option 3 ID : 6306801038912
Option 4 ID : 6306801038911

Q.6 Which of the following is the permanent key for the institution that activates SOUL package?

- Ans
- ☐ 1. Support key
- ☐ 2. Handshake key
- ☒ 3. Product key
- ☐ 4. Activation key

Question ID : 630680267369
Option 1 ID : 6306801038866
Option 2 ID : 6306801038863
Option 3 ID : 6306801038864
Option 4 ID : 6306801038865

Q.7 What is the purpose of Cutter Author Tables?

- Ans
- ☒ 1. To Individualize a book within the same class
- ☐ 2. To build symmetrical memory aids
- ☐ 3. To indicate the collection that a book belongs
- ☐ 4. To provide ultimate class of a book

Question ID : 630680267342
Option 1 ID : 6306801038757
Option 2 ID : 6306801038755
Option 3 ID : 6306801038758
Option 4 ID : 6306801038756

Q.8 What is the level of 'supervision' duty?

- Ans
- ☒ 1. Human skills
- ☐ 2. Conceptual skills
- ☐ 3. Technical skills
- ☐ 4. Diagnostic skills

Question ID : 630680267376
Option 1 ID : 6306801038892
Option 2 ID : 6306801038891
Option 3 ID : 6306801038893
Option 4 ID : 6306801038894

Q.9 What is the Baconian System of Classification?

- Ans
- ☒

1. Classification of entities like living organisms, chemicals
- ☒

2. Division of knowledge into three categories based on the three functions of the brain – memory, reason and imagination.
- ☒

3. Division of knowledge into substance, quantity, quality, relation, space, time
- ☒

4. Classification system designed to organize micro thought as indexes.

Question ID : 630680267331
Option 1 ID : 6306801038711
Option 2 ID : 6306801038714
Option 3 ID : 6306801038712
Option 4 ID : 6306801038713

Q.10 How do you categorize Spreadsheets?

- Ans
- ☒

1. Relational files
- ☒

2. Sequential files
- ☒

3. Network files
- ☒

4. Hierarchical files

Question ID : 630680267354
Option 1 ID : 6306801038804
Option 2 ID : 6306801038803
Option 3 ID : 6306801038806
Option 4 ID : 6306801038805

Q.11 What is the full form of CILIP?

- Ans
- ☒

1. Centre for International Library and Information Professionals
- ☒

2. Chartered Institute of Library and Information Professionals
- ☒

3. Charter of International Library and Information Professionals
- ☒

4. Council of International Library and Information Professional Associations

Question ID : 630680267313
Option 1 ID : 6306801038640
Option 2 ID : 6306801038639
Option 3 ID : 6306801038642
Option 4 ID : 6306801038641

Q.12 What is the value of digits in the Notation system?

- Ans
- ☒

1. Ordinal value
- ☒

2. Quantitative value
- ☒

3. Cardinal value
- ☒

4. Nominal Value

Question ID : 630680267340
Option 1 ID : 6306801038750
Option 2 ID : 6306801038748
Option 3 ID : 6306801038747
Option 4 ID : 6306801038749

Q.13 Which of the following source of income is useful to meet the recurring expenditure in a University library?

- Ans ☒ 1. Gifts, endowments
☒ 2. Grants from parent body
☒ 3. Ad hoc grants
☒ 4. Sale of publications, membership fee

Question ID : 630680267379
 Option 1 ID : 6306801038906
 Option 2 ID : 6306801038904
 Option 3 ID : 6306801038903
 Option 4 ID : 6306801038905

Q.14 In which year the Library Development Committee, Bombay under the Chairmanship of A.A.A.Faizee was appointed?

- Ans ☒ 1. 1945
☒ 2. 1942
☒ 3. 1939
☒ 4. 1948

Question ID : 630680267309
 Option 1 ID : 6306801038625
 Option 2 ID : 6306801038624
 Option 3 ID : 6306801038623
 Option 4 ID : 6306801038626

Q.15 Which of the following is NOT a deposit library under the Delivery of Books and Newspapers (Public Library Act) Act 1954?

- Ans ☒ 1. Asiatic Society Library, Bombay
☒ 2. Delhi Public Library, Delhi
☒ 3. Asiatic Society Library, Kolkata
☒ 4. Connemara Public Library, Chennai

Question ID : 630680267317
 Option 1 ID : 6306801038657
 Option 2 ID : 6306801038656
 Option 3 ID : 6306801038658
 Option 4 ID : 6306801038655

Q.16 Who was the Chairman of Empowered Committee (1986) for National Information Policy appointed by the Dept. of Culture, Govt. of India?

- Ans ☒ 1. Komal Anand
☒ 2. Kalpana Dasgupta
☒ 3. D.P. Chattopadhyaya
☒ 4. P.N.Kaula

Question ID : 630680267323
 Option 1 ID : 6306801038681
 Option 2 ID : 6306801038680
 Option 3 ID : 6306801038682
 Option 4 ID : 6306801038679

Q.17 What is meant by scalability of a library server?

- Ans
- ☐ 1. Computationally powerful
 - ☐ 2. Multiple access and transactions
 - ☐ 3. Adequate memory
 - ☒ 4. Adding additional storage, networking capabilities

Question ID : 630680267365
Option 1 ID : 6306801038847
Option 2 ID : 6306801038850
Option 3 ID : 6306801038849
Option 4 ID : 6306801038848

Q.18 Who developed the dynamic theory for the library classification?

- Ans
- ☒ 1. S.R.Ranganathan
 - ☐ 2. W.C.Berwick Sayers
 - ☐ 3. Melvil Dewey
 - ☐ 4. H.E.Bliss

Question ID : 630680267332
Option 1 ID : 6306801038718
Option 2 ID : 6306801038716
Option 3 ID : 6306801038715
Option 4 ID : 6306801038717

Q.19 Who said that "A librarian to be a successful professional must keep burning 'Seven Lamps of Conduct'"?

- Ans
- ☐ 1. B.M.Headicar
 - ☒ 2. R.L.Mittal
 - ☐ 3. S.R.Ranganathan
 - ☐ 4. R.G.Prasher

Question ID : 630680267324
Option 1 ID : 6306801038684
Option 2 ID : 6306801038685
Option 3 ID : 6306801038683
Option 4 ID : 6306801038686

Q.20 How to render the form of heading for South Indian names according to AACR-2R?

- Ans
- ☐ 1. Father's given name
 - ☐ 2. Surname
 - ☐ 3. Any other prefix like place, caste
 - ☒ 4. Given/forename

Question ID : 630680267403
Option 1 ID : 6306801038999
Option 2 ID : 6306801039000
Option 3 ID : 6306801039002
Option 4 ID : 6306801039001